

**Sub Inspector in Delhi Police and Central Armed Police Forces Examination 2023  
Paper I**

Roll Number	
Candidate Name	
Venue Name	
Exam Date	05/10/2023
Exam Time	9:00 AM - 11:00 AM
Subject	SICPO Paper I 2023

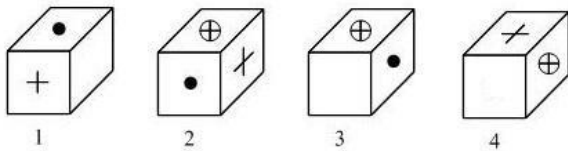
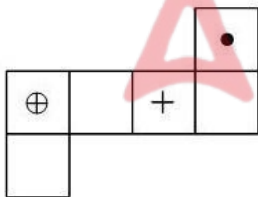
Section : General Intelligence and Reasoning

**Q.1** Three of the following letter-clusters are alike in some manner and one is different.  
Select the one that is different.

- Ans  1. LOKP  
 2. HMIL  
 3. KPLO  
 4. SXTW

Question ID : 264330180759  
 Option 1 ID : 264330709006  
 Option 2 ID : 264330709005  
 Option 3 ID : 264330709003  
 Option 4 ID : 264330709004  
 Status : Answered  
 Chosen Option : 1

**Q.2** If the given sheet is folded to form a cube, which of the given figures are possible?  
 (The elements are shown to indicate the sides only.)



- Ans  1. Only 2 and 3  
 2. Only 2 and 4  
 3. Only 1 and 3  
 4. Only 1 and 4

Question ID : 26433065677  
 Option 1 ID : 264330257271  
 Option 2 ID : 264330257269  
 Option 3 ID : 264330257270  
 Option 4 ID : 264330257268  
 Status : Answered  
 Chosen Option : 3

# Test Prime

ALL EXAMS,  
ONE SUBSCRIPTION



**40,000+**  
Mock Tests



Personalised  
Report Card



Unlimited  
Re-Attempt



**500+**  
Exam Covered



Previous Year  
Papers

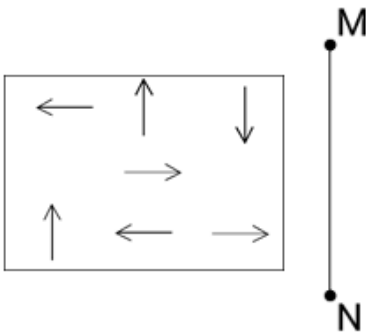


**500%**  
Refund



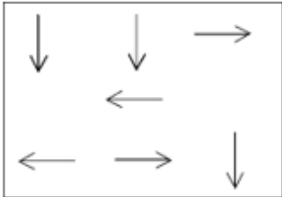
**DOWNLOAD NOW**

Q.3 Select the correct mirror image of the given figure, when the mirror is placed at line MN as shown.

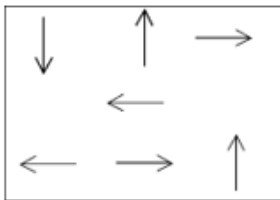


Ans

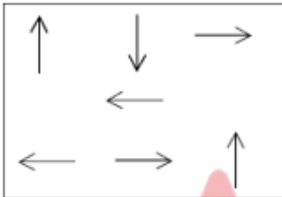
✗ 1.



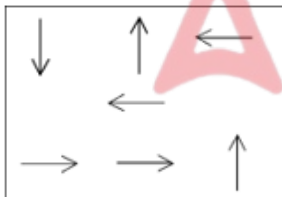
✓ 2.



✗ 3.



✗ 4.



Question ID : 264330170164

Option 1 ID : 264330667334

Option 2 ID : 264330667331

Option 3 ID : 264330667332

Option 4 ID : 264330667333

Status : Answered

Chosen Option : 2

Q.4 If A denotes '+', B denotes 'x', C denotes '-', and D denotes '÷', then what will be the value of the following equation?  
 $94 C 12 B 6 A 216 D 9 = ?$

Ans ✓ 1. 46

✗ 2. 52

✗ 3. 47

✗ 4. 68

Question ID : 264330129785

Option 1 ID : 264330508372

Option 2 ID : 264330508373

Option 3 ID : 264330508374

Option 4 ID : 264330508371

Status : Answered

Chosen Option : 1

Q.5 Which of the following numbers will replace the question mark (?) in the given series?

42, 53, 46, ?, 53, 66

Ans ✓ 1. 58

✗ 2. 51

✗ 3. 55

✗ 4. 48

Question ID : 26433091012

Option 1 ID : 264330357458

Option 2 ID : 264330357460

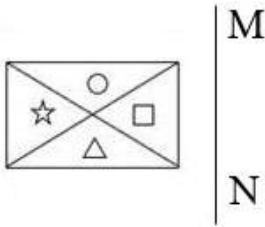
Option 3 ID : 264330357459

Option 4 ID : 264330357457

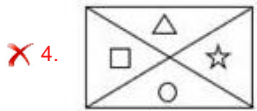
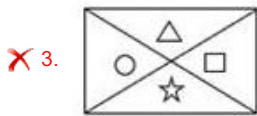
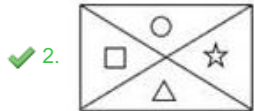
Status : Not Answered

Chosen Option : --

Q.6 Select the correct mirror image of the given figure when the mirror is placed at line MN as shown.



Ans



Question ID : 26433056624

Option 1 ID : 264330221483

Option 2 ID : 264330221480

Option 3 ID : 264330221482

Option 4 ID : 264330221481

Status : Answered

Chosen Option : 2

Q.7 Six friends are sitting in a circle facing the centre. Sumit sits second to the right of Amit. Karan is an immediate neighbour of Param. Tony sits third to the right of Amit. Dharam is an immediate neighbour of Amit and Sumit. Karan sits second to the right of Sumit. Who sits fourth to the right of Param?

Ans ✗ 1. Karan

✗ 2. Sumit

✗ 3. Dharam

✓ 4. Tony

Question ID : 264330145407

Option 1 ID : 264330569885

Option 2 ID : 264330569884

Option 3 ID : 264330569886

Option 4 ID : 264330569883

Status : Answered

Chosen Option : 4

Q.8 Select the option that is related to the fifth number in the same way as the first number is related to the second number and the third number is related to the fourth number.  
 $32 : 10 :: 24 : 12 :: 98 : ?$

- Ans
- 1. 25
  - 2. 24
  - 3. 43
  - 4. 34

Question ID : 26433079116  
 Option 1 ID : 264330310471  
 Option 2 ID : 264330310468  
 Option 3 ID : 264330310469  
 Option 4 ID : 264330310470  
 Status : Not Answered  
 Chosen Option : --

Q.9 Select the set in which the numbers are related in the same way as are the numbers of the following sets.

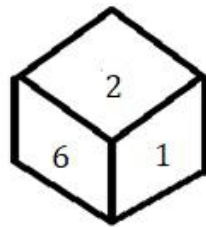
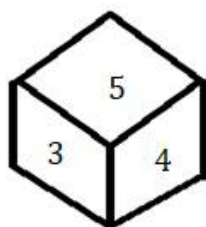
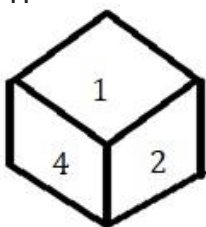
(NOTE : Operations should be performed on the whole numbers, without breaking down the numbers into its constituent digits. E.g. 13 – Operations on 13 such as adding /subtracting /multiplying etc. to 13 can be performed. Breaking down 13 into 1 and 3 and then performing mathematical operations on 1 and 3 is NOT allowed)

(7, 52), (9, 84)

- Ans
- 1. (13, 172)
  - 2. (11, 125)
  - 3. (14, 196)
  - 4. (8, 65)

Question ID : 264330145295  
 Option 1 ID : 264330569435  
 Option 2 ID : 264330569437  
 Option 3 ID : 264330569438  
 Option 4 ID : 264330569436  
 Status : Answered  
 Chosen Option : 1

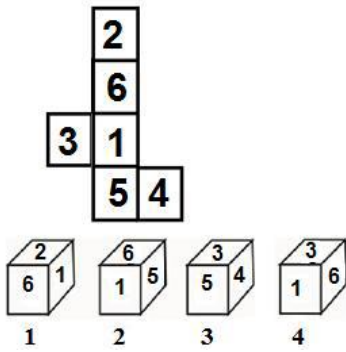
Q.10 Three different positions of the same dice are shown. Find the number on the face opposite the face showing '6'.



- Ans
- 1. 4
  - 2. 3
  - 3. 1
  - 4. 2

Question ID : 264330108969  
 Option 1 ID : 264330428156  
 Option 2 ID : 264330428155  
 Option 3 ID : 264330428153  
 Option 4 ID : 264330428154  
 Status : Answered  
 Chosen Option : 1

Q.11 If the given sheet is folded to form a cube, which of the given figures is/are possible?  
(The numbers are shown to indicate the sides only.)



- Ans  1. Only 4  
 2. Only 3  
 3. Only 1 and 4  
 4. Only 2

Question ID : 26433065672  
 Option 1 ID : 264330257251  
 Option 2 ID : 264330257250  
 Option 3 ID : 264330257248  
 Option 4 ID : 264330257249  
 Status : Answered  
 Chosen Option : 1

Q.12 In a certain code language, 'COLD' is coded as '6428' and 'TIDE' is coded as '9673'.  
What is the code for 'D' in the given code language?

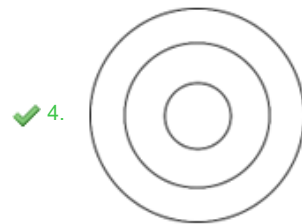
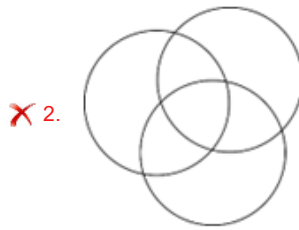
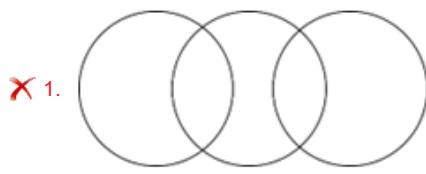
- Ans  1. 2  
 2. 6  
 3. 3  
 4. 9

Question ID : 264330169654  
 Option 1 ID : 264330665315  
 Option 2 ID : 264330665317  
 Option 3 ID : 264330665316  
 Option 4 ID : 264330665318  
 Status : Answered  
 Chosen Option : 2

Q.13 Select the Venn diagram that best illustrates the relationship between the following classes.

Europe, United Kingdom, London

Ans



Question ID : 264330132030  
 Option 1 ID : 264330517216  
 Option 2 ID : 264330517215  
 Option 3 ID : 264330517218  
 Option 4 ID : 264330517217

Status : Answered

Chosen Option : 4

Q.14 'Z @ A' means 'Z is the son of A'.  
 'Z \* A' means 'Z is the brother of A'.  
 'Z x A' means 'Z is the father of A'.  
 'Z # A' means 'Z is the sister of A'.  
 'Z \$ A' means 'Z is the daughter of A'.  
 'Z = A' means 'Z is the mother of A'.  
 How is A related to Y in the following expression?  
 A \* S = J @ M x Y

- Ans
- ✗ 1. A is the father of Y.
  - ✗ 2. A is the brother of Y.
  - ✓ 3. A is the brother of Y's mother.
  - ✗ 4. A is the cousin of Y.

Question ID : 26433057298  
 Option 1 ID : 264330224179  
 Option 2 ID : 264330224176  
 Option 3 ID : 264330224177  
 Option 4 ID : 264330224178

Status : Answered

Chosen Option : 3



Q.15 Which letter-cluster will replace the question mark (?) to complete the given series?  
ZFKQ, BCMN, ?, FWQH, HTSE

- Ans
- 1. DZPJ
  - 2. DBOM
  - 3. DAOL
  - 4. DZOK

Question ID : 26433076663

Option 1 ID : 264330300719

Option 2 ID : 264330300718

Option 3 ID : 264330300717

Option 4 ID : 264330300716

Status : Answered

Chosen Option : 4

Q.16 If '+' means '÷', '-' means '+', '×' means '-' and '÷' means '×', then what will come in place of (?) in the given equation?  
 $8 \div 5 - 5 \times 10 + 2 = ?$

- Ans
- 1. 40
  - 2. 30
  - 3. 35
  - 4. 45

Question ID : 26433091648

Option 1 ID : 264330359958


Option 2 ID : 264330359960

Option 3 ID : 264330359957

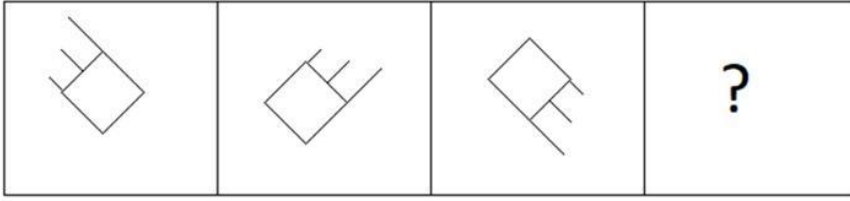
Option 4 ID : 264330359959

Status : Answered

Chosen Option : 1

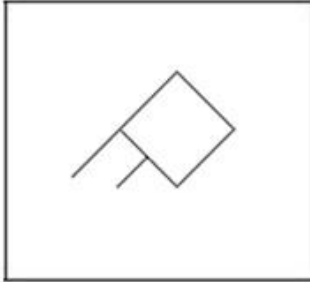


Q.17 Select the figure that will come next in the following figure series.

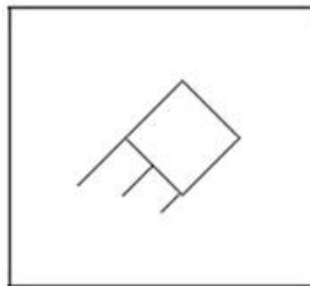


Ans

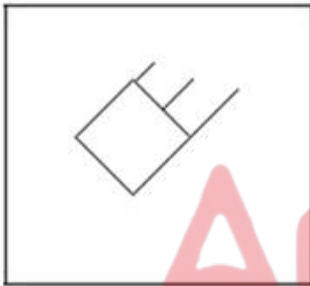
✗ 1.



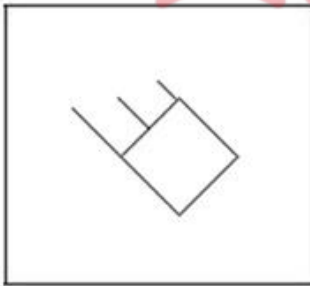
✓ 2.



✗ 3.

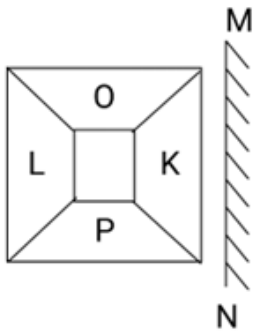


✗ 4.

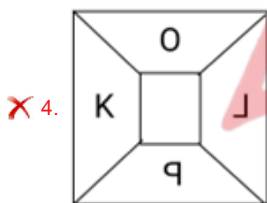
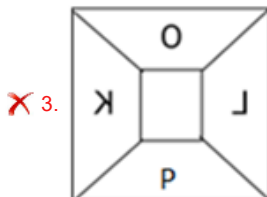
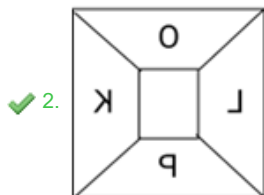
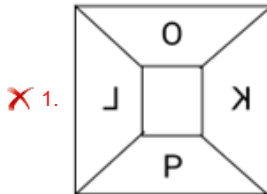


Question ID : 26433087071  
 Option 1 ID : 264330341927  
 Option 2 ID : 264330341928  
 Option 3 ID : 264330341926  
 Option 4 ID : 264330341925  
 Status : Answered  
 Chosen Option : 2

Q.18 Select the correct mirror image of the given pattern when the mirror is placed at 'MN' as shown below.



Ans



Question ID : 264330134117

Option 1 ID : 264330525492

Option 2 ID : 264330525491

Option 3 ID : 264330525493

Option 4 ID : 264330525494

Status : Answered

Chosen Option : 2

Q.19 F is the brother of J. E is the sister of D. K is the sister of L. D is the son of L. J is the father of E. How is D related to F?

Ans ✗ 1. Sister's husband

✓ 2. Brother's son

✗ 3. Wife

✗ 4. Brother's daughter

Question ID : 264330126019

Option 1 ID : 264330493749

Option 2 ID : 264330493751

Option 3 ID : 264330493750

Option 4 ID : 264330493748

Status : Answered

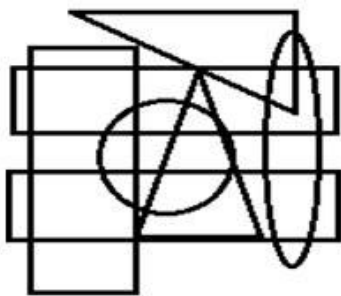
Chosen Option : 4

Q.20 In a certain code language, 'EDUCATION' is written as 'FCVBBSJNO' and 'MICROSOFT' is written as 'NHDQPRPEU'. How will 'SEMICIRCLE' be written in that language?

- Ans  1. TDNHDHSBMD  
 2. TDNHHDSBFM  
 3. TDHNDHSFBD  
 4. TDNHHDSBFD

Question ID : 26433070268  
 Option 1 ID : 264330275548  
 Option 2 ID : 264330275551  
 Option 3 ID : 264330275550  
 Option 4 ID : 264330275549  
 Status : Answered  
 Chosen Option : 1

Q.21 Select the option figure which is embedded in the given figure as its part (rotation is NOT allowed).



- Ans  1.   
 2.   
 3.   
 4.



Question ID : 264330145464  
 Option 1 ID : 264330570112  
 Option 2 ID : 264330570111  
 Option 3 ID : 264330570114  
 Option 4 ID : 264330570113  
 Status : Answered  
 Chosen Option : 1

Q.22 Select the option that is related to the third word in the same way as the second word is related to the first word.  
(The words must be considered as meaningful words and must not be related to each other based on the number of letters/number of consonants/vowels in the word.)  
Pedal : Bicycle :: Oar : ?

- Ans
- 1. Car
  - 2. Television
  - 3. Canoe
  - 4. Motorcycle

Question ID : 26433087294  
 Option 1 ID : 264330342813  
 Option 2 ID : 264330342816  
 Option 3 ID : 264330342814  
 Option 4 ID : 264330342815  
 Status : Answered  
 Chosen Option : 3

Q.23 P is to the north of Q. T is to the east of Q and S is to the east of P. S is to the north-east of T and south-west of R. What is the position of R with respect to Q? (All positions are arranged in GRID pattern)

- Ans
- 1. North-east
  - 2. South-west
  - 3. East
  - 4. South

Question ID : 26433068362  
 Option 1 ID : 264330267962  
 Option 2 ID : 264330267963  
 Option 3 ID : 264330267961  
 Option 4 ID : 264330267960  
 Status : Answered  
 Chosen Option : 1

Q.24 Choose one of the following correct combinations of mathematical signs which can be filled to balance the following equation.

$$86 \bigcirc 42 \bigcirc 12 \bigcirc 3 \bigcirc 12 \bigcirc 3 \bigcirc 4$$

- Ans
- 1. +, -, +, x, =, +
  - 2. -, -, +, =, x, +
  - 3. -, +, +, x, =, +
  - 4. -, +, x, =, +, +

Question ID : 264330129642  
 Option 1 ID : 264330507935  
 Option 2 ID : 264330507936  
 Option 3 ID : 264330507937  
 Option 4 ID : 264330507934  
 Status : Answered  
 Chosen Option : 2

Q.25 Six students are sitting around a circular table facing the centre. A is an immediate neighbour of both E and D. E sits third to the right of C. D sits third to the left of F. E is an immediate neighbour of F. B sits second to the left of E. Who is the immediate neighbour of both A and C?

- Ans
- 1. E
  - 2. D
  - 3. F
  - 4. B

Question ID : 26433068168  
Option 1 ID : 264330267187  
Option 2 ID : 264330267184  
Option 3 ID : 264330267185  
Option 4 ID : 264330267186  
Status : Answered  
Chosen Option : 2

Q.26 If '+' means '-', '-' means '+', '÷' means 'x' and 'x' means '÷', then what will come in place of the (?) in the following equation?  
 $15 \times 30 + 15 - 3 \div 2 = ?$

- Ans
- 1. 15
  - 2. 30
  - 3. 35
  - 4. 40

Question ID : 264330114249  
Option 1 ID : 264330449081  
Option 2 ID : 264330449082  
Option 3 ID : 264330449083  
Option 4 ID : 264330449084  
Status : Answered  
Chosen Option : 3

Q.27 Which of the following terms will replace the question mark (?) in the given series?  
HKOE , KNOE , ? , QTOE , TWOE

- Ans
- 1. NQOE
  - 2. QNOE
  - 3. NQEO
  - 4. NOQE

Question ID : 264330102492  
Option 1 ID : 264330402397  
Option 2 ID : 264330402398  
Option 3 ID : 264330402399  
Option 4 ID : 264330402400  
Status : Answered  
Chosen Option : 1

Q.28 उस विकल्प का चयन कीजिए, जो तीसरे शब्द से उसी प्रकार संबंधित है, जिस प्रकार दूसरा शब्द पहले शब्द से संबंधित है। (शब्दों को अर्थपूर्ण शब्दों के रूप में माना जाना चाहिए, और वह शब्द में अक्षरों की संख्या/व्यंजनों/स्वरों की संख्या के आधार पर एक-दूसरे से संबंधित नहीं होना चाहिए।)

इच्छा करना (Yearn) : लालसा करना (Crave) :: फुरती (Haste) : ?

- Ans  1. तत्परता (Alacrity)  
 2. तरसना (Hanker)  
 3. विलंब (Delay)  
 4. विश्राम (Leisure)

Question ID : 264330145399

Option 1 ID : 264330569854

Option 2 ID : 264330569851

Option 3 ID : 264330569852

Option 4 ID : 264330569853

Status : Answered

Chosen Option : 1

Q.29 Select the set in which the numbers are related in the same way as are the numbers of the following sets.

(NOTE : Operations should be performed on the whole numbers, without breaking down the numbers into its constituent digits. E.g. 13- Operations on 13 such as adding /subtracting /multiplying etc. to 13 can be performed. Breaking down 13 into 1 and 3 and then performing mathematical operations on 1 and 3 is not allowed.)

(23, 6, 35)

(13, 5, 23)

- Ans  1. (24, 5, 33)  
 2. (16, 4, 20)  
 3. (25, 8, 41)  
 4. (13, 7, 28)

Question ID : 26433057444

Option 1 ID : 264330224762

Option 2 ID : 264330224760

Option 3 ID : 264330224763

Option 4 ID : 264330224761

Status : Answered

Chosen Option : 3

Q.30 If '+' means '-', '-' means '×', '×' means '÷' and '÷' means '+', what will come in place of '?' in the following equation?

$42 \times 6 - 7 \div 13 + 28 = ?$

- Ans  1. 43  
 2. 27  
 3. 34  
 4. 39

Question ID : 264330101146

Option 1 ID : 264330397132

Option 2 ID : 264330397129

Option 3 ID : 264330397130

Option 4 ID : 264330397131

Status : Answered

Chosen Option : 3

Q.31 In a certain code language, 'GRAPE' is coded as 21-54-3-48-15 and 'MELON' is coded as 39-15-36-45-42. How will 'PEACH' be coded in the same language?

- Ans
- 1. 48-15-3-8-27
  - 2. 48-15-3-9-24
  - 3. 49-15-3-9-27
  - 4. 45-16-3-9-24

Question ID : 264330132208  
Option 1 ID : 264330517927  
Option 2 ID : 264330517928  
Option 3 ID : 264330517930  
Option 4 ID : 264330517929  
Status : Answered  
Chosen Option : 2

Q.32 Which number will replace the question mark (?) in the following series?  
6, 20, 42, ?, 110, 156

- Ans
- 1. 80
  - 2. 72
  - 3. 50
  - 4. 64

Question ID : 26433067831  
Option 1 ID : 264330265836  
Option 2 ID : 264330265837  
Option 3 ID : 264330265839  
Option 4 ID : 264330265838  
Status : Not Answered  
Chosen Option : --

Q.33 Which of the following numbers will replace the question mark (?) in the given series?  
473, 517, 561, ?, 649, 693

- Ans
- 1. 607
  - 2. 598
  - 3. 603
  - 4. 605

Question ID : 26433067627  
Option 1 ID : 264330265022  
Option 2 ID : 264330265020  
Option 3 ID : 264330265021  
Option 4 ID : 264330265023  
Status : Answered  
Chosen Option : 4



Q.34 Select the option that represents the letters which, when sequentially placed from left to right in the blanks below, will complete the letter series.

\_ L \_ \_ K S \_ T U \_ S L \_ \_ K

- Ans
- 1. LUSKTUK
  - 2. UTSKTLU
  - 3. STULKTU
  - 4. KTULUTS

Question ID : 26433086953

Option 1 ID : 264330341454

Option 2 ID : 264330341453

Option 3 ID : 264330341455

Option 4 ID : 264330341456

Status : Answered

Chosen Option : 3

Q.35 Select the option that represents the correct order of the given words as they would appear in an English dictionary?

1. Flint
2. Flec
3. Flaw
4. Fleet
5. Flight

- Ans
- 1. 3, 5, 4, 2, 1
  - 2. 2, 3, 4, 5, 1
  - 3. 3, 2, 4, 5, 1
  - 4. 3, 4, 2, 5, 1

Question ID : 26433067248

Option 1 ID : 264330263504

Option 2 ID : 264330263506

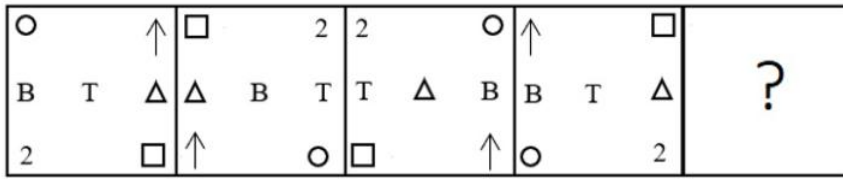
Option 3 ID : 264330263505

Option 4 ID : 264330263507

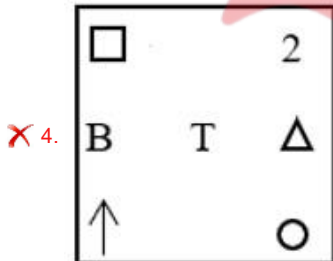
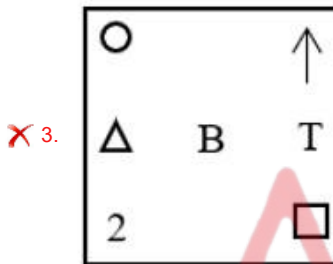
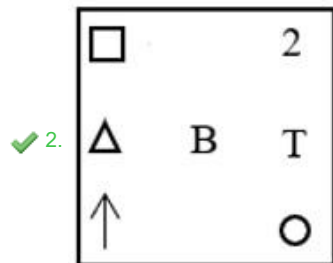
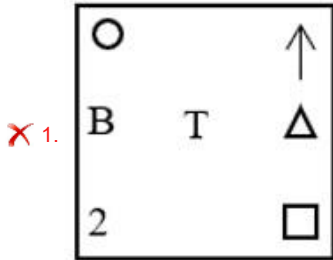
Status : Answered

Chosen Option : 3

Q.36 Which figure from the given options would replace the question mark (?) if the following figure series were to be continued?



Ans



Question ID : 264330145481

Option 1 ID : 264330570181

Option 2 ID : 264330570179

Option 3 ID : 264330570180

Option 4 ID : 264330570182

Status : Answered

Chosen Option : 3

Q.37 Select the set in which the numbers are related in the same way as are the numbers of the following set.

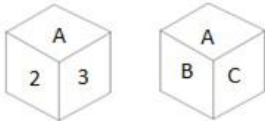
(NOTE : Operations should be performed on the whole numbers, without breaking down the numbers into its constituent digits. E.g. 13 – Operations on 13 such as adding /subtracting /multiplying etc. to 13 can be performed. Breaking down 13 into 1 and 3 and then performing mathematical operations on 1 and 3 is NOT allowed)

(2, 5, 341)  
(1, 7, 510)

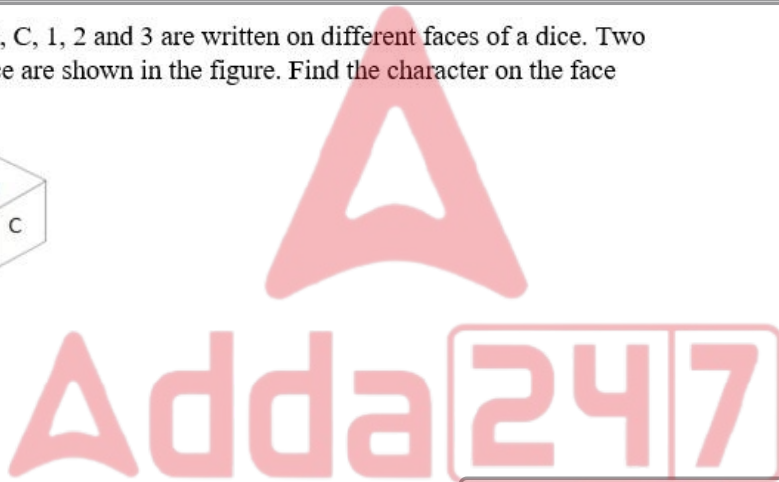
- Ans  1. (8,2,140)  
 2. (1,2,25)  
 3. (2,5,56)  
 4. (3,6,64)

Question ID : 264330145323  
 Option 1 ID : 264330569547  
 Option 2 ID : 264330569549  
 Option 3 ID : 264330569550  
 Option 4 ID : 264330569548  
 Status : Answered  
 Chosen Option : 2

Q.38 Six characters A, B, C, 1, 2 and 3 are written on different faces of a dice. Two positions of this dice are shown in the figure. Find the character on the face opposite to C.



- Ans  1. 2  
 2. 1  
 3. 3  
 4. B



Question ID : 264330109201  
 Option 1 ID : 264330429081  
 Option 2 ID : 264330429084  
 Option 3 ID : 264330429083  
 Option 4 ID : 264330429082  
 Status : Answered  
 Chosen Option : 3

**Q.39** Given below are two statements and two conclusions. Take the statements to be true even if they are at variance with commonly known facts, and decide whether the conclusion(s) follow(s) the given statements.

**Statements:**

Some dates are hazelnuts.

All hazelnuts are walnuts.

**Conclusions:**

I. Some dates are walnuts.

II. Some walnuts are hazelnuts.

**Ans** ✓ 1. Both the conclusions follow

✗ 2. Only conclusion I follows

✗ 3. Neither conclusion I nor II follows

✗ 4. Only conclusion II follows

Question ID : 26433056646

Option 1 ID : 264330221570

Option 2 ID : 264330221568

Option 3 ID : 264330221571

Option 4 ID : 264330221569

Status : Answered

Chosen Option : 1

**Q.40** Pooja drives 4 km towards east from point A. She takes a right turn and drives 2 km. Then she takes a left turn and drives 3 km. Again, she takes a left turn and drives 2 km to reach point B. How far and towards which direction should she drive now in order to reach point A again?

**Ans** ✓ 1. 7 km towards west

✗ 2. 4 km towards south

✗ 3. 4 km towards east

✗ 4. 5 km towards north

Question ID : 26433091676

Option 1 ID : 264330360071

Option 2 ID : 264330360069

Option 3 ID : 264330360072

Option 4 ID : 264330360070

Status : Answered

Chosen Option : 1

**Q.41** In this question, three statements are given, followed by two conclusions numbered I and II. Assuming the statements to be true, even if they seem to be at variance with commonly known facts, decide which of the conclusions logically follows/follow from the statements.

**Statements:**

I. All teas are coffees.

II. All coffees are beverages.

III. Some teas are drinks

**Conclusions:**

I. All teas are beverages.

II. No drink is a coffee.

**Ans** ✓ 1. Only conclusion I follows

✗ 2. Only conclusion II follows

✗ 3. Both conclusions I and II follow

✗ 4. Neither conclusion I nor II follows

Question ID : 264330104075

Option 1 ID : 264330408601

Option 2 ID : 264330408602

Option 3 ID : 264330408603

Option 4 ID : 264330408604

Status : Answered

Chosen Option : 1

**Q.42** Given below are two statements and two conclusions. Take the statements to be true even if they are at variance with commonly known facts, and decide whether the conclusion(s) follow(s) the given statements.

Statements:

All irons are coppers.

All coppers are aluminiums.

Conclusions:

I. Some aluminiums are irons

II. Some aluminiums are coppers

- Ans**
- 1. Only conclusion II follows
  - 2. Neither conclusion I nor II follows
  - 3. Only conclusion I follows
  - 4. Both the conclusions follow

Question ID : 26433056641

Option 1 ID : 264330221549

Option 2 ID : 264330221551

Option 3 ID : 264330221548

Option 4 ID : 264330221550

Status : Answered

Chosen Option : 4

**Q.43** Select the correct option that indicates the arrangement of the given words in the order in which they appear in an English dictionary.

1. Desperate
2. Desolate
3. Destruction
4. Desire
5. Descend
6. Destination

- Ans**
- 1. 5, 4, 2, 1, 3, 6
  - 2. 5, 4, 1, 6, 2, 3
  - 3. 5, 4, 2, 1, 6, 3
  - 4. 5, 4, 1, 2, 6, 3

Question ID : 264330145379

Option 1 ID : 264330569773

Option 2 ID : 264330569771

Option 3 ID : 264330569772

Option 4 ID : 264330569774

Status : Answered

Chosen Option : 3

**Q.44** In a certain code language, 'YATCH' is coded as 67 and 'DINE' is coded as 40. How will 'MANGO' be coded in that language?

- Ans**
- 1. 57
  - 2. 60
  - 3. 62
  - 4. 65

Question ID : 26433074707

Option 1 ID : 264330292917

Option 2 ID : 264330292918

Option 3 ID : 264330292919

Option 4 ID : 264330292916

Status : Answered

Chosen Option : 2

Q.45 Which of the given figures when placed in the 5<sup>th</sup> position would continue the series that is established by the first four figures?

M	+	W	S	+
S	2	+	M	2
1	2	3	4	

Ans

✗ 1.

M	S
+	+

✓ 2.

S	M
+	+

✗ 3.

M	+
S	S

✗ 4.

S	W
+	+

Question ID : 26433087308  
 Option 1 ID : 264330342871  
 Option 2 ID : 264330342870  
 Option 3 ID : 264330342869  
 Option 4 ID : 264330342872  
 Status : Answered  
 Chosen Option : 2

Q.46 If '+' means '-', '-' means 'x', 'x' means '÷' and '÷' means '+', what will come in place of '?' in the following equation?  
 $45 - 3 \div 144 \times 12 + 38 = ?$

- Ans
- 1. 123
  - 2. 109
  - 3. 91
  - 4. 95

Question ID : 264330101153  
Option 1 ID : 264330397159  
Option 2 ID : 264330397158  
Option 3 ID : 264330397160  
Option 4 ID : 264330397157  
Status : Answered  
Chosen Option : 2

Q.47 Three of the following letter-clusters are alike in some manner and one is different.  
Select the one that is different.

- Ans
- 1. OKNL
  - 2. JQAZ
  - 3. FBEC
  - 4. HDGE

Question ID : 264330145347  
Option 1 ID : 264330569643  
Option 2 ID : 264330569644  
Option 3 ID : 264330569645  
Option 4 ID : 264330569646  
Status : Answered  
Chosen Option : 2

Q.48 In a certain code language, 'STORY' is coded as '97' and 'PULL' is coded as '61'. How will 'INCOME' be coded in that language?

- Ans
- 1. 54
  - 2. 49
  - 3. 59
  - 4. 47

Question ID : 26433079044  
Option 1 ID : 264330310183  
Option 2 ID : 264330310180  
Option 3 ID : 264330310181  
Option 4 ID : 264330310182  
Status : Answered  
Chosen Option : 3

Q.49 Which of the following numbers will replace the question mark (?) in the given series

32, 32, 32, 34, ?, 106, 530

- Ans
- 1. 96
  - 2. 38
  - 3. 102
  - 4. 34

Question ID : 264330145336  
 Option 1 ID : 264330569599  
 Option 2 ID : 264330569600  
 Option 3 ID : 264330569602  
 Option 4 ID : 264330569601  
 Status : Not Answered  
 Chosen Option : --

Q.50 Which two signs should be interchanged to make the given equation correct?

$729 \times 9 - (56 - 6) \times 5 \div 2 + 152 \times 19 = 69$

- Ans
- 1.  $\times$  and  $+$
  - 2.  $\times$  and  $\div$
  - 3.  $+$  and  $-$
  - 4.  $+$  and  $-$

Question ID : 264330145337  
 Option 1 ID : 264330569603  
 Option 2 ID : 264330569605  
 Option 3 ID : 264330569606  
 Option 4 ID : 264330569604  
 Status : Answered  
 Chosen Option : 2

Section : General Knowledge and General Awareness

Q.1 Ashtadhyayi, is a Sanskrit treatise on grammar, written in the 6th to 5th century BCE by \_\_\_\_\_.

- Ans
- 1. Panini
  - 2. Patanjali
  - 3. Agastya
  - 4. Vishvamitra

Question ID : 264330165550  
 Option 1 ID : 264330649282  
 Option 2 ID : 264330649280  
 Option 3 ID : 264330649279  
 Option 4 ID : 264330649281  
 Status : Answered  
 Chosen Option : 1



Q.2 The provision of fundamental duties in the Indian Constitution is inspired by \_\_\_\_\_.

- Ans
- 1. the constitution of USSR
  - 2. the constitution of France
  - 3. the constitution of Canada
  - 4. the constitution of USA

Question ID : 264330111510

Option 1 ID : 264330438125

Option 2 ID : 264330438128

Option 3 ID : 264330438127

Option 4 ID : 264330438126

Status : Answered

Chosen Option : 1

Q.3 Which of the following is NOT included in inventory investment when calculating national income?

- Ans
- 1. Change in sales during the year
  - 2. Change in stock of raw material
  - 3. Change in stock of semi-finished goods
  - 4. Change in stock of finished goods

Question ID : 264330120865

Option 1 ID : 264330473678

Option 2 ID : 264330473677

Option 3 ID : 264330473676

Option 4 ID : 264330473675

Status : Not Answered

Chosen Option : --

Q.4 The \_\_\_\_\_ birth rate indicates the number of live births occurring during the year per 1000 population estimated at midyear.

- Ans
- 1. crude
  - 2. positive
  - 3. negative
  - 4. neutral

Question ID : 264330163246

Option 1 ID : 264330640298

Option 2 ID : 264330640296

Option 3 ID : 264330640297

Option 4 ID : 264330640295

Status : Not Answered

Chosen Option : --

Q.5 The shape of a basketball court is a \_\_\_\_\_.

- Ans
- 1. square
  - 2. rectangle
  - 3. triangle
  - 4. circle

Question ID : 264330109852

Option 1 ID : 264330431685

Option 2 ID : 264330431686

Option 3 ID : 264330431688

Option 4 ID : 264330431687

Status : Answered

Chosen Option : 4

Q.6 Under which Article of the Indian Constitution shall the executive power of the Union be vested in the President?

- Ans  1. Article 53  
 2. Article 55  
 3. Article 58  
 4. Article 56

Question ID : 264330114494  
Option 1 ID : 264330450061  
Option 2 ID : 264330450062  
Option 3 ID : 264330450064  
Option 4 ID : 264330450063  
Status : Answered  
Chosen Option : 1

Q.7 आप उस प्रकार की दवाओं को क्या कहते हैं, जो ग्राही (receptor) को स्विच ऑन करके प्राकृतिक संदेशवाहक (natural messenger) की प्रतिकृति करती हैं?

- Ans  1. प्रति-अवसादक (Antidepressants)  
 2. एगोनिस्ट (Agonist)  
 3. अवसादक (Depressants)  
 4. एंटागोनिस्ट (Antagonist)

Question ID : 264330145209  
Option 1 ID : 264330569094  
Option 2 ID : 264330569093  
Option 3 ID : 264330569091  
Option 4 ID : 264330569092  
Status : Not Answered  
Chosen Option : --

Q.8 In which of the following years did the government opt for a plan holiday after the seventh five-year plan?

- Ans  1. From 1991 to 1993  
 2. From 1990 to 1992  
 3. From 1992 to 1993  
 4. From 1989 to 1991

Question ID : 264330145226  
Option 1 ID : 264330569160  
Option 2 ID : 264330569161  
Option 3 ID : 264330569162  
Option 4 ID : 264330569159  
Status : Not Answered  
Chosen Option : --

Q.9 Which of the following did NOT emerge as a result of disintegration of the Bahmani kingdom during the 16<sup>th</sup> century?

- Ans  1. Ahmadnagar  
 2. Gaur  
 3. Golconda  
 4. Bidar

Question ID : 264330106564  
Option 1 ID : 264330418558  
Option 2 ID : 264330418560  
Option 3 ID : 264330418559  
Option 4 ID : 264330418557  
Status : Not Answered  
Chosen Option : --

Q.10 When was the 8<sup>th</sup> round of the General Agreement on Tariffs and Trade (GATT), the so-called 'Uruguay Round' which led to the establishment of World Trade Organization (WTO) completed?

- Ans  1. 1993  
 2. 1994  
 3. 1991  
 4. 1992

Question ID : 26433064581  
Option 1 ID : 264330252918  
Option 2 ID : 264330252919  
Option 3 ID : 264330252916  
Option 4 ID : 264330252917  
Status : Not Answered  
Chosen Option : --

Q.11 In which of the following languages is 'Childhood Days - A Memoir' by Satyajit Ray written?

- Ans  1. Hindi  
 2. Telugu  
 3. Kannada  
 4. Bengali

Question ID : 264330145183  
Option 1 ID : 264330568988  
Option 2 ID : 264330568989  
Option 3 ID : 264330568990  
Option 4 ID : 264330568987  
Status : Not Answered  
Chosen Option : --

Q.12 Which of the following dance forms originated in Southeastern India?

- Ans  1. Chhau  
 2. Sattriya  
 3. Kathak  
 4. Kuchipudi

Question ID : 26433064643  
Option 1 ID : 264330253167  
Option 2 ID : 264330253166  
Option 3 ID : 264330253164  
Option 4 ID : 264330253165  
Status : Not Answered  
Chosen Option : --

Q.13 Where is Red Lake found?

- Ans  1. USA  
 2. UK  
 3. China  
 4. Japan

Question ID : 26433064474  
Option 1 ID : 264330252490  
Option 2 ID : 264330252491  
Option 3 ID : 264330252488  
Option 4 ID : 264330252489  
Status : Not Answered  
Chosen Option : --

Q.14 How many fundamental duties are listed in the Indian Constitution as of 2022?

- Ans  1. 13  
 2. 10  
 3. 12  
 4. 11

Question ID : 264330113380  
Option 1 ID : 264330445608  
Option 2 ID : 264330445605  
Option 3 ID : 264330445607  
Option 4 ID : 264330445606  
Status : Not Answered  
Chosen Option : --

Q.15 Which of the following is NOT an example of small savings?

- Ans  1. Mutual Funds  
 2. National Savings Certificates  
 3. Kisan Vikas Patras  
 4. Post Office Deposits

Question ID : 264330145238  
Option 1 ID : 264330569209  
Option 2 ID : 264330569207  
Option 3 ID : 264330569210  
Option 4 ID : 264330569208  
Status : Not Answered  
Chosen Option : --

Q.16 \_\_\_\_\_ land is suitable for cropping on a regular basis.

- Ans
- 1. Urban
  - 2. Barren
  - 3. Arable
  - 4. Marginal

Question ID : 264330163191  
Option 1 ID : 264330640075  
Option 2 ID : 264330640076  
Option 3 ID : 264330640077  
Option 4 ID : 264330640078  
Status : Not Answered  
Chosen Option : --

Q.17 Who among the following had written the novel Coolie, that concentrated on social misery caused by inhumanity?

- Ans
- 1. RK Narayan
  - 2. Vijay Tendulkar
  - 3. VS Naipal
  - 4. Mulk Raj Anand

Question ID : 26433071684  
Option 1 ID : 264330281162  
Option 2 ID : 264330281163  
Option 3 ID : 264330281160  
Option 4 ID : 264330281161  
Status : Not Answered  
Chosen Option : --

Q.18 Which of the following dance forms traces its lineage to the ancient dance of Sadir Attam?

- Ans
- 1. Bharatanatyam
  - 2. Kuchipudi
  - 3. Mohiniyattam
  - 4. Kathakali

Question ID : 264330145146  
Option 1 ID : 264330568840  
Option 2 ID : 264330568841  
Option 3 ID : 264330568839  
Option 4 ID : 264330568842  
Status : Answered  
Chosen Option : 1

Q.19 What percentage of jobs in India are at risk of automation, as per World Bank data, 2016?

- Ans
- 1. 77%
  - 2. 40%
  - 3. 69%
  - 4. 55%

Question ID : 264330111359  
 Option 1 ID : 264330437521  
 Option 2 ID : 264330437524  
 Option 3 ID : 264330437522  
 Option 4 ID : 264330437523  
 Status : Not Answered  
 Chosen Option : --

Q.20 निम्नलिखित में से कौन-सा गोलकृमि है?

- Ans
- 1. प्लैनेरिया (Planaria)
  - 2. एस्केरिस (Ascaris)
  - 3. यकृत पर्णकृमि (Liver fluke)
  - 4. टीनिया (Taenia)

Question ID : 26433082205  
 Option 1 ID : 264330322656  
 Option 2 ID : 264330322653  
 Option 3 ID : 264330322655  
 Option 4 ID : 264330322654  
 Status : Not Answered  
 Chosen Option : --

Q.21 Which of the following indicates the system introduced by Lord Cornwallis granting legal ownership of land to the zamindars in Bengal in order to get a fixed revenue by a fixed date?

- Ans
- 1. The Ryotwari System
  - 2. Mahalwari System
  - 3. Taluqdari System
  - 4. The Permanent Settlement

Question ID : 26433099165  
 Option 1 ID : 264330389273  
 Option 2 ID : 264330389276  
 Option 3 ID : 264330389275  
 Option 4 ID : 264330389274  
 Status : Not Answered  
 Chosen Option : --

Q.22 Vultures are:

- Ans  1. carnivores  
 2. omnivores  
 3. decomposers  
 4. herbivores

Question ID : 26433086613  
Option 1 ID : 264330340096  
Option 2 ID : 264330340094  
Option 3 ID : 264330340093  
Option 4 ID : 264330340095  
Status : Answered  
Chosen Option : 1

Q.23 Which of the following is NOT an example of a minor industrial region of India?

- Ans  1. Durg-Raipur region  
 2. Ambala-Amritsar region  
 3. Northern Malabar region  
 4. Hugli region

Question ID : 264330145256  
Option 1 ID : 264330569282  
Option 2 ID : 264330569281  
Option 3 ID : 264330569280  
Option 4 ID : 264330569279  
Status : Not Answered  
Chosen Option : --

Q.24 Jagjit Singh is associated with which form of singing?

- Ans  1. Ghazal  
 2. Thumri  
 3. Dhrupad  
 4. Tappa

Question ID : 26433074854  
Option 1 ID : 264330293507  
Option 2 ID : 264330293504  
Option 3 ID : 264330293505  
Option 4 ID : 264330293506  
Status : Answered  
Chosen Option : 1

Q.25 By observing the motion of objects on an inclined plane \_\_\_\_\_ deduced that objects move with a constant speed when no force acts on them.

- Ans  1. Michael Faraday  
 2. Johannes Kepler  
 3. Galileo  
 4. Archimedes

Question ID : 26433055071  
Option 1 ID : 264330215270  
Option 2 ID : 264330215271  
Option 3 ID : 264330215268  
Option 4 ID : 264330215269  
Status : Not Answered  
Chosen Option : --

**Q.26** In which type of rainfall, winds move out from a high-pressure area with wind direction clockwise in the northern hemisphere, and anti-clockwise in the southern hemisphere?

- Ans**
- 1. Orography
  - 2. Cyclones
  - 3. Anticyclone
  - 4. Convection

Question ID : 26433011911  
 Option 1 ID : 264330439732  
 Option 2 ID : 264330439731  
 Option 3 ID : 264330439729  
 Option 4 ID : 264330439730  
 Status : Not Answered  
 Chosen Option : --

**Q.27** From the given options, choose the one which is NOT a product of the decomposition reaction of Lead nitrate.

- Ans**
- 1. Nitrogen dioxide
  - 2. Oxygen
  - 3. Nitrogen
  - 4. Lead oxide

Question ID : 264330169298  
 Option 1 ID : 264330663972  
 Option 2 ID : 264330663973  
 Option 3 ID : 264330663974  
 Option 4 ID : 264330663971  
 Status : Not Answered  
 Chosen Option : --

**Q.28** The Eastern Ghats stretch from the \_\_\_\_\_ to the Nigiris in the south.

- Ans**
- 1. Damodar Valley
  - 2. Son Valley
  - 3. Mahanadi Valley
  - 4. Godavari Valley

Question ID : 264330119793  
 Option 1 ID : 264330469449  
 Option 2 ID : 264330469447  
 Option 3 ID : 264330469448  
 Option 4 ID : 264330469450  
 Status : Not Answered  
 Chosen Option : --

**Q.29** When was the Atmiya Sabha founded to attack the evils within Hinduism?

- Ans**
- 1. 1845
  - 2. 1814
  - 3. 1839
  - 4. 1828

Question ID : 264330112194  
 Option 1 ID : 264330440864  
 Option 2 ID : 264330440862  
 Option 3 ID : 264330440863  
 Option 4 ID : 264330440861  
 Status : Not Answered  
 Chosen Option : --



Q.30 The 'Servants of India Society' was the brainchild of which of the following leaders?

- Ans  1. Chittaranjan Das  
 2. Gopal Krishna Gokhale  
 3. BR Ambedkar  
 4. Lala Lajpat Rai

Question ID : 264330165392  
Option 1 ID : 264330648648  
Option 2 ID : 264330648647  
Option 3 ID : 264330648649  
Option 4 ID : 264330648650  
Status : Not Answered  
Chosen Option : --

Q.31 The President of which of the following countries was invited as the Chief Guest for the Republic Day parade on 26 January 2020?

- Ans  1. New Zealand  
 2. Australia  
 3. Brazil  
 4. Indonesia

Question ID : 26433070819  
Option 1 ID : 264330277725  
Option 2 ID : 264330277726  
Option 3 ID : 264330277724  
Option 4 ID : 264330277727  
Status : Not Answered  
Chosen Option : --

Q.32 1 kilowatt is equivalent to:

- Ans  1. 3600 KJ/h  
 2. 3600 calorie  
 3. 7200 KJ/h  
 4. 7200 Joule

Question ID : 264330131763  
Option 1 ID : 264330516151  
Option 2 ID : 264330516153  
Option 3 ID : 264330516152  
Option 4 ID : 264330516154  
Status : Not Answered  
Chosen Option : --

Q.33 The star-shaped temples were built during the reign of:

- Ans  1. Chalukaya  
 2. Badami  
 3. Cholas  
 4. Hoysala

Question ID : 264330164855  
Option 1 ID : 264330646548  
Option 2 ID : 264330646547  
Option 3 ID : 264330646550  
Option 4 ID : 264330646549  
Status : Not Answered  
Chosen Option : --

Q.34 Hara Shankar Bhattacharya is a maestro of \_\_\_\_\_.

- Ans  1. sitar  
 2. sarangi  
 3. violin  
 4. santoor

Question ID : 264330145186  
Option 1 ID : 264330569001  
Option 2 ID : 264330569000  
Option 3 ID : 264330569002  
Option 4 ID : 264330568999  
Status : Not Answered  
Chosen Option : --

Q.35 Which radioactive element with atomic number 43 in the modern periodic table is unstable, and the half-lives of all its isotopes are relatively short, from 4.2 million years to 5.0 s?

- Ans  1. Nobelium  
 2. Promethium  
 3. Neptunium  
 4. Technetium

Question ID : 264330110064  
Option 1 ID : 264330432536  
Option 2 ID : 264330432533  
Option 3 ID : 264330432535  
Option 4 ID : 264330432534  
Status : Not Answered  
Chosen Option : --

Q.36 The Himalayas have been divided on the basis of regions from west to east. The correct order of regions from west to east is:

- Ans  1. Punjab Himalayas, Nepal Himalayas, Kumaon Himalayas and Assam Himalayas  
 2. Punjab Himalayas, Kumaon Himalayas, Nepal Himalayas and Assam Himalayas  
 3. Punjab Himalayas, Kumaon Himalayas, Assam Himalayas and Nepal Himalayas  
 4. Punjab Himalayas, Nepal Himalayas, Assam Himalayas and Kumaon Himalayas

Question ID : 264330169318  
Option 1 ID : 264330664053  
Option 2 ID : 264330664054  
Option 3 ID : 264330664052  
Option 4 ID : 264330664051  
Status : Not Answered  
Chosen Option : --

Q.37 How many times has India won the ICC T20 Men's World Cup in cricket?

- Ans  1. 3  
 2. 2  
 3. 1  
 4. 4

Question ID : 26433071373  
Option 1 ID : 264330279918  
Option 2 ID : 264330279917  
Option 3 ID : 264330279916  
Option 4 ID : 264330279919  
Status : Not Answered  
Chosen Option : --

Q.38 Which chemical element of Group 18 of the periodic table is produced by the natural radioactive decay of uranium in soils and rocks?

- Ans
- 1. Oganesson
  - 2. Krypton
  - 3. Radon
  - 4. Neon

Question ID : 264330110061  
Option 1 ID : 264330432523  
Option 2 ID : 264330432522  
Option 3 ID : 264330432524  
Option 4 ID : 264330432521  
Status : Not Answered  
Chosen Option : --

Q.39 Chad Sukra festival is celebrated by the Jaintia tribe of \_\_\_\_\_.

- Ans
- 1. Jharkhand
  - 2. Assam
  - 3. Punjab
  - 4. Meghalaya

Question ID : 26433086641  
Option 1 ID : 264330340208  
Option 2 ID : 264330340207  
Option 3 ID : 264330340205  
Option 4 ID : 264330340206  
Status : Answered  
Chosen Option : 4

Q.40 Which of the following industries was NOT in Schedule A of Industrial Policy 1956?

- Ans
- 1. Air transport
  - 2. Mining of salt
  - 3. Mineral oils
  - 4. Iron and steel

Question ID : 264330141497  
Option 1 ID : 264330554325  
Option 2 ID : 264330554326  
Option 3 ID : 264330554324  
Option 4 ID : 264330554323  
Status : Not Answered  
Chosen Option : --

Q.41 Which Article of the Constitution of India states that the Prime Minister is appointed by the President of India?

- Ans
- 1. Article 73
  - 2. Article 75
  - 3. Article 74
  - 4. Article 76

Question ID : 264330130471  
Option 1 ID : 264330510995  
Option 2 ID : 264330510997  
Option 3 ID : 264330510996  
Option 4 ID : 264330510998  
Status : Answered  
Chosen Option : 3

Q.42 Ammannur Madhava Chakyar was conferred the Padma Shri for his contribution to which of the following dance forms?

- Ans  1. Kutiyattam  
 2. Kuchipudi  
 3. Kathakali  
 4. Yakshagana

Question ID : 264330145160  
Option 1 ID : 264330568895  
Option 2 ID : 264330568898  
Option 3 ID : 264330568897  
Option 4 ID : 264330568896  
Status : Not Answered  
Chosen Option : --

Q.43 Which cell organelle appears as rounded or sausage-shaped structures under electron microscopy, measuring about 0.5-1.0  $\mu\text{m}$  in diameter and 2-8  $\mu\text{m}$  in length?

- Ans  1. Ribosomes  
 2. Lysosomes  
 3. Mitochondria  
 4. Plastids

Question ID : 264330145196  
Option 1 ID : 264330569039  
Option 2 ID : 264330569041  
Option 3 ID : 264330569042  
Option 4 ID : 264330569040  
Status : Not Answered  
Chosen Option : --

Q.44 When was Khandesh merged into the Mughal empire by Akbar?

- Ans  1. 1601  
 2. 1595  
 3. 1597  
 4. 1605

Question ID : 264330109022  
Option 1 ID : 264330428367  
Option 2 ID : 264330428365  
Option 3 ID : 264330428368  
Option 4 ID : 264330428366  
Status : Not Answered  
Chosen Option : --

Q.45 How many types of the amendment are mentioned by the Indian Constitution as per Article 368?

- Ans  1. Five  
 2. Four  
 3. Two  
 4. Three

Question ID : 264330118523  
Option 1 ID : 264330465493  
Option 2 ID : 264330465494  
Option 3 ID : 264330465496  
Option 4 ID : 264330465495  
Status : Not Answered  
Chosen Option : --

Q.46 In the game of Ice hockey, during normal play how many players are there in each team on the ice at any one time to compete?

- Ans
- 1. 12
  - 2. 6
  - 3. 10
  - 4. 5

Question ID : 26433089942  
Option 1 ID : 264330353247  
Option 2 ID : 264330353245  
Option 3 ID : 264330353246  
Option 4 ID : 264330353248  
Status : Not Answered  
Chosen Option : --

Q.47 Siachen in Himalayas is:

- Ans
- 1. a glacier
  - 2. a national park
  - 3. a dam
  - 4. a lake

Question ID : 264330169991  
Option 1 ID : 264330666640  
Option 2 ID : 264330666641  
Option 3 ID : 264330666639  
Option 4 ID : 264330666642  
Status : Answered  
Chosen Option : 1

Q.48 Maimata is a popular folk dance of which of the following states?

- Ans
- 1. Tripura
  - 2. Uttarakhand
  - 3. Haryana
  - 4. Punjab

Question ID : 264330164794  
Option 1 ID : 264330646306  
Option 2 ID : 264330646303  
Option 3 ID : 264330646304  
Option 4 ID : 264330646305  
Status : Not Answered  
Chosen Option : --

Q.49 To which feature of the Constitution of India does the appointment of the Governor by the Centre belong?

- Ans
- 1. Federal feature
  - 2. Directive Principles
  - 3. Supremacy of the Constitution
  - 4. Unitary system

Question ID : 264330145268  
Option 1 ID : 264330569330  
Option 2 ID : 264330569327  
Option 3 ID : 264330569329  
Option 4 ID : 264330569328  
Status : Answered  
Chosen Option : 4

Q.50 The term 'inning' is related to which of the following sports?

- Ans  1. Volleyball  
 2. Kho-Kho  
 3. Hockey  
 4. Basketball

Question ID : 264330118473  
Option 1 ID : 264330465294  
Option 2 ID : 264330465295  
Option 3 ID : 264330465296  
Option 4 ID : 264330465293  
Status : Not Answered  
Chosen Option : --

Section : Quantitative Aptitude

Q.1 Find the fourth proportional to 0.48, 0.84 and 32.

- Ans  1. 65  
 2. 34  
 3. 56  
 4. 43

Question ID : 264330103973  
Option 1 ID : 264330408194  
Option 2 ID : 264330408195  
Option 3 ID : 264330408193  
Option 4 ID : 264330408196  
Status : Answered  
Chosen Option : 3

**Q.2** Study the given table and answer the question that follows.  
The table shows data of population and literacy/illiteracy rate among the population in three different villages.

Village	Respective ratio between number of males and females	Percentage of literates (Males and females) out of total population	Number of illiterates (Males and females) out of total population
P	2 : 5	45	380
Q	3 : 7	65	270
R	1 : 3	80	150

The number of illiterates in village R is what percentage less than that in village P?

- Ans
- 1.  $60\frac{11}{19}\%$
  - 2.  $60\frac{9}{19}\%$
  - 3.  $60\frac{10}{19}\%$
  - 4.  $60\frac{8}{19}\%$

Question ID : 264330165501

Option 1 ID : 264330649083

Option 2 ID : 264330649085

Option 3 ID : 264330649084

Option 4 ID : 264330649086

Status : Answered

Chosen Option : 3

**Q.3** In a circle of radius 42 cm, an arc subtends an angle of  $60^\circ$  at the centre. Find the length of the arc.

(Take  $\pi = \frac{22}{7}$ )

- Ans
- 1. 44 cm
  - 2. 21 cm
  - 3. 22 cm
  - 4. 42 cm

Question ID : 264330165441

Option 1 ID : 264330648843

Option 2 ID : 264330648846

Option 3 ID : 264330648844

Option 4 ID : 264330648845

Status : Answered

Chosen Option : 1

Q.4 Mihir buys a book for ₹625. However, because of certain urgency, he sells it for ₹550. Find his loss percentage.

- Ans  1. 12%  
 2. 14%  
 3. 10%  
 4. 15%

Question ID : 264330102340

Option 1 ID : 264330401826

Option 2 ID : 264330401827

Option 3 ID : 264330401825

Option 4 ID : 264330401828

Status : Answered

Chosen Option : 1

Q.5 The salary of Arpit fell by 5% after 1 year and further fell by 8% after the second year due to bad performance. Initially, his salary was ₹80,000. What is his current salary (in ₹)?

- Ans  1. 69620  
 2. 69920  
 3. 70920  
 4. 65720

Question ID : 264330103310

Option 1 ID : 264330405546

Option 2 ID : 264330405547

Option 3 ID : 264330405545

Option 4 ID : 264330405548

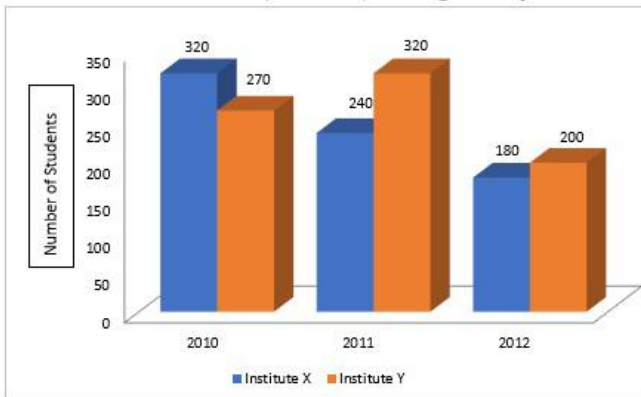
Status : Answered

Chosen Option : 2





**Q.6** Study the given graph and answer the question that follows.  
The graph shows data related to number of students enrolled for a vocational course in two institutes (X and Y) during three years.



What is the difference between the average number of students enrolled in institute X in 2010 and 2011 and that in institute Y in 2011 and 2012?

- Ans**  1. 20  
 2. 15  
 3. 18  
 4. 22

Question ID : 264330158274  
 Option 1 ID : 264330620457  
 Option 2 ID : 264330620455  
 Option 3 ID : 264330620456  
 Option 4 ID : 264330620458  
 Status : Answered  
 Chosen Option : 1

**Q.7** The total surface area of a solid hemisphere is  $4158 \text{ cm}^2$ . Find its volume (in  $\text{cm}^3$ ).

- Ans**  1. 462  
 2. 9702  
 3. 1848  
 4. 19404

Question ID : 264330145109  
 Option 1 ID : 264330568692  
 Option 2 ID : 264330568691  
 Option 3 ID : 264330568693  
 Option 4 ID : 264330568694  
 Status : Answered  
 Chosen Option : 4

**Q.8** The average weight of 8 students is 48 kg. If four students of average weight 44 kg and four students of average weight 58 kg is also added, then find the average weight of 16 students.

- Ans**  1. 49.5 kg  
 2. 48 kg  
 3. 49 kg  
 4. 48.5 kg

Question ID : 264330165520  
 Option 1 ID : 264330649162  
 Option 2 ID : 264330649159  
 Option 3 ID : 264330649160  
 Option 4 ID : 264330649161  
 Status : Answered  
 Chosen Option : 1

**Q.9** Simplify the given expression.

$$(1 - 2x)^2 - (1 + 2x)^2$$

- Ans**  1.  $8x$   
 2.  $-8x$   
 3.  $-(2 + 8x^2)$   
 4.  $2 + 8x^2$

Question ID : 264330157760  
 Option 1 ID : 264330618401  
 Option 2 ID : 264330618402  
 Option 3 ID : 264330618400  
 Option 4 ID : 264330618399  
 Status : Answered  
 Chosen Option : 2

**Q.10** The table below shows the number of laptops sold by the 4 sellers and the ratio of Brand1 laptops sold to Brand 2 laptops sold.

Seller	Total laptops sold	Brand1 laptops sold: Brand2 laptops sold
A	4000	3 : 1
B	6000	2 : 1
C	8000	5 : 3
D	5000	1 : 4

The number of Brand1 laptops sold by A seller is how many more than the number of Brand2 laptops sold by B seller?

- Ans**  1. 1200  
 2. 800  
 3. 1000  
 4. 600

Question ID : 264330167245  
 Option 1 ID : 264330655977  
 Option 2 ID : 264330655976  
 Option 3 ID : 264330655978  
 Option 4 ID : 264330655975  
 Status : Answered  
 Chosen Option : 3

Q.11 A boy goes from home to school at a speed of 30 km/h and returns back at a speed of 70 km/h. What is his average speed for the journey?

- Ans  1. 42 km/h  
 2. 48 km/h  
 3. 38 km/h  
 4. 36 km/h

Question ID : 264330104489

Option 1 ID : 264330410259

Option 2 ID : 264330410257

Option 3 ID : 264330410258

Option 4 ID : 264330410260

Status : Answered

Chosen Option : 1

Q.12 Rupu's income is 20% more than Madhu's income. Madhu's income is less than Rupu's income by:

- Ans  1.  $17\frac{2}{3}\%$   
 2. 20%  
 3.  $18\frac{2}{3}\%$   
 4.  $16\frac{2}{3}\%$

Question ID : 264330145077

Option 1 ID : 264330568565

Option 2 ID : 264330568563

Option 3 ID : 264330568564

Option 4 ID : 264330568566

Status : Answered

Chosen Option : 4

Q.13 What annual instalment (in ₹) will discharge a debt of ₹9,429 due in three years at 12.25% simple interest per annum? [Note: Instalments will be paid at the end of Year 1, Year 2 and Year 3.]

- Ans  1. 2,840  
 2. 2800  
 3. 2700  
 4. 2760

Question ID : 264330112545

Option 1 ID : 264330442265

Option 2 ID : 264330442268

Option 3 ID : 264330442267

Option 4 ID : 264330442266

Status : Not Answered

Chosen Option : --

**Q.14** Study the given table and answer the question that follows.  
The table shows the number of students studying in 6 different classes of 6 different schools.

Schools	V	VI	VII	VIII	IX	X
P	152	160	145	156	147	144
Q	148	166	150	155	157	143
R	161	152	140	145	143	165
S	159	142	149	140	142	168
T	147	144	158	163	154	150
U	150	160	162	160	160	140
Total	917	924	904	919	903	910

Which class has the minimum number of students from all schools together?

- Ans  1. VIII  
 2. IX  
 3. VII  
 4. X

Question ID : 264330157723  
 Option 1 ID : 264330618252  
 Option 2 ID : 264330618253  
 Option 3 ID : 264330618251  
 Option 4 ID : 264330618254  
 Status : Answered  
 Chosen Option : 2

**Q.15** Find the least number which is exactly divisible by 20, 28, 34, 60 and 75.

- Ans  1. 36220  
 2. 35900  
 3. 34500  
 4. 35700

Question ID : 264330102310  
 Option 1 ID : 264330401706  
 Option 2 ID : 264330401707  
 Option 3 ID : 264330401708  
 Option 4 ID : 264330401705  
 Status : Answered  
 Chosen Option : 4

**Q.16** The mean proportional between 0.03 and 0.0003 is:

- Ans  1. 0.0003  
 2. 0.0013  
 3. 0.003  
 4. 0.033

Question ID : 264330145037  
 Option 1 ID : 264330568405  
 Option 2 ID : 264330568403  
 Option 3 ID : 264330568404  
 Option 4 ID : 264330568406  
 Status : Answered  
 Chosen Option : 3

Q.17 If  $a + b + c = 5$  and  $ab + bc + ca = 7$ , then the value of  $a^3 + b^3 + c^3 - 3abc$  is:

- Ans  1. 15  
 2. 20  
 3. 25  
 4. 30

Question ID : 264330157773

Option 1 ID : 264330618451

Option 2 ID : 264330618452

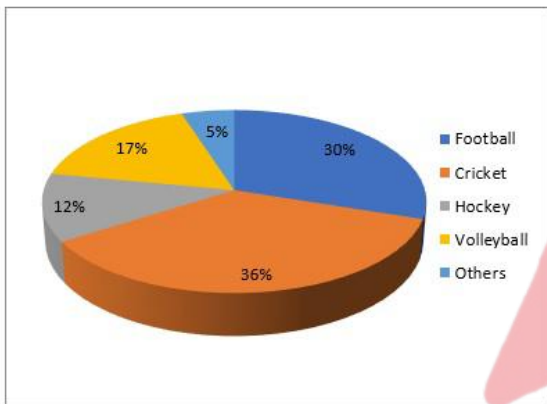
Option 3 ID : 264330618453

Option 4 ID : 264330618454

Status : Answered

Chosen Option : 2

Q.18 The given pie-chart represents the survey report on favourite games of a group of young people.



If a total of 4980 people were surveyed, then what is the central angle produced by the sector indicating football?

- Ans  1.  $108^\circ$   
 2.  $105^\circ$   
 3.  $100^\circ$   
 4.  $90^\circ$

Question ID : 264330145024

Option 1 ID : 264330568351

Option 2 ID : 264330568354

Option 3 ID : 264330568353

Option 4 ID : 264330568352

Status : Answered

Chosen Option : 1

Q.19 A shopkeeper increases the cost price of an item by 50% and offers a discount of 40% on this marked price. What is his loss percentage?

- Ans
- 1. 15%
  - 2. 20%
  - 3. 10%
  - 4. 5%

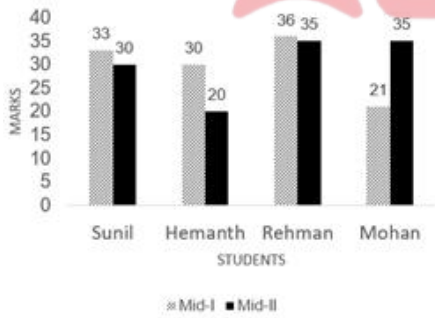
Question ID : 264330104507  
 Option 1 ID : 264330410329  
 Option 2 ID : 264330410330  
 Option 3 ID : 264330410332  
 Option 4 ID : 264330410331  
 Status : Answered  
 Chosen Option : 3

Q.20 An item with a marked price of ₹z was sold for ₹6,622, after a discount of 12% was offered. What was the value of z?

- Ans
- 1. ₹7,425
  - 2. ₹7,500
  - 3. ₹7,525
  - 4. ₹7,575

Question ID : 264330131159  
 Option 1 ID : 264330513750  
 Option 2 ID : 264330513748  
 Option 3 ID : 264330513747  
 Option 4 ID : 264330513749  
 Status : Answered  
 Chosen Option : 3

Q.21 Study the given bar graph carefully to answer the question that follows.  
 Marks obtained by four students in Mid-I and Mid-II.



Marks obtain by Hemanth in Mid-I are what percentage of the total marks obtained by all the students in Mid-I?

- Ans
- 1. 30%
  - 2. 15%
  - 3. 20%
  - 4. 25%

Question ID : 264330165426  
 Option 1 ID : 264330648783  
 Option 2 ID : 264330648784  
 Option 3 ID : 264330648785  
 Option 4 ID : 264330648786  
 Status : Answered  
 Chosen Option : 4

Q.22 The following table shows the income of a company in a year from various sectors:

Sectors	Finance	Communication	Production	Sales	Transportation
Amount (in lakh ₹)	85	60	67	115	75

What is the difference (in lakh ₹) between the income from the maximum earning sector and the minimum earning sector?

- Ans
- 1. 48
  - 2. 40
  - 3. 30
  - 4. 55

Question ID : 264330165074

Option 1 ID : 264330647423

Option 2 ID : 264330647424

Option 3 ID : 264330647425

Option 4 ID : 264330647426

Status : Answered

Chosen Option : 4

Q.23 If interest be compounded half-yearly, then find the compound interest on ₹8,000 at 20% p.a. for 1 year.

- Ans
- 1. ₹1,675
  - 2. ₹1,690
  - 3. ₹1,685
  - 4. ₹1,680

Question ID : 264330145058

Option 1 ID : 264330568487

Option 2 ID : 264330568490

Option 3 ID : 264330568489

Option 4 ID : 264330568488

Status : Answered

Chosen Option : 4

Q.24 What is the HCF of  $(x^6 + 1)$  and  $(x^4 - 1)$ ?

- Ans
- 1. 1
  - 2.  $(1 + x)$
  - 3.  $(1 - x^2)$
  - 4.  $(1 + x^2)$

Question ID : 26433064881

Option 1 ID : 264330254118

Option 2 ID : 264330254117

Option 3 ID : 264330254116

Option 4 ID : 264330254119

Status : Answered

Chosen Option : 1

Q.25

The value of  $\frac{\frac{1}{2} \div 3\frac{1}{4} + \frac{1}{2} \div \frac{13}{14} + \frac{1}{5}}{\frac{1}{5} \times 3\frac{1}{2} - \frac{1}{3} \div 1\frac{3}{4} \times 3\frac{1}{2}}$  is:

- Ans  1. 33  
 2. 36  
 3. 38  
 4. 40

Question ID : 26433064877  
 Option 1 ID : 264330254103  
 Option 2 ID : 264330254100  
 Option 3 ID : 264330254102  
 Option 4 ID : 264330254101  
 Status : Answered  
 Chosen Option : 2

Q.26 If 2 men or 4 women can build a wall in 34 days, in how many days can 6 men and 5 women build the same wall?

- Ans  1. 24  
 2. 8  
 3. 12  
 4. 16

Question ID : 264330102378  
 Option 1 ID : 264330401980  
 Option 2 ID : 264330401977  
 Option 3 ID : 264330401978  
 Option 4 ID : 264330401979  
 Status : Answered  
 Chosen Option : 2

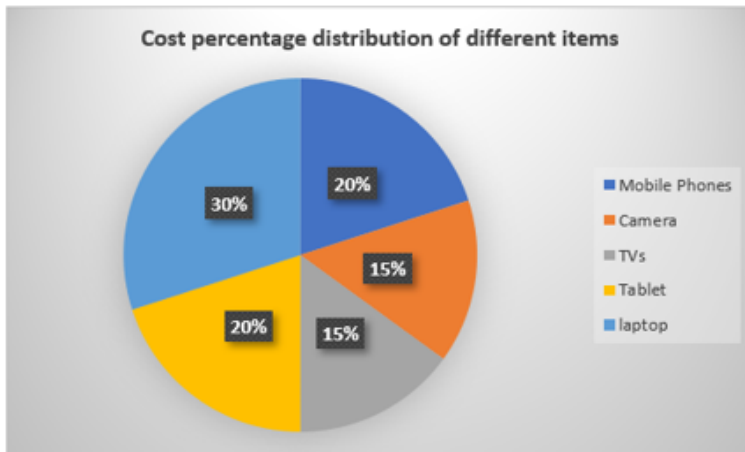
Q.27 Find the HCF of 78, 84, 90 and 112.

- Ans  1. 1  
 2. 2  
 3. 5  
 4. 7

Question ID : 264330102308  
 Option 1 ID : 264330401697  
 Option 2 ID : 264330401698  
 Option 3 ID : 264330401699  
 Option 4 ID : 264330401700  
 Status : Answered  
 Chosen Option : 2



Q.28 Study the given graph and answer the question that follows.  
The following graph shows the distribution of the cost percentage of different items.



If a person purchased all the items for ₹3,00,000, then the cost of a TV is less than that of a laptop by:

- Ans
- 1. ₹40,000
  - 2. ₹55,000
  - 3. ₹50,000
  - 4. ₹45,000

Question ID : 264330157065  
 Option 1 ID : 264330615633  
 Option 2 ID : 264330615634  
 Option 3 ID : 264330615631  
 Option 4 ID : 264330615632  
 Status : Answered  
 Chosen Option : 4

Q.29 If  $\cos A = \frac{1}{2}$ ,  $0 \leq A \leq 90^\circ$ , then what is the value of  $\sin (180 - A)$ ?

- Ans
- 1.  $\frac{1}{2}$
  - 2.  $\frac{\sqrt{3}}{2}$
  - 3.  $\frac{1}{\sqrt{3}}$
  - 4. 1

Question ID : 264330157753  
 Option 1 ID : 264330618371  
 Option 2 ID : 264330618372  
 Option 3 ID : 264330618374  
 Option 4 ID : 264330618373  
 Status : Answered  
 Chosen Option : 2

Q.30 Mahesh agreed to sell rice with 24% loss, as the rice got rotten. However, he cheated customers and gave only 19 gm of rice in place of 50 gm of rice. What is the percentage of his profit or loss?

- Ans
- 1. 100% loss
  - 2.  $\frac{100}{3}$ % loss
  - 3.  $\frac{100}{3}$ % profit
  - 4. 100% profit

Question ID : 264330131521

Option 1 ID : 264330515188

Option 2 ID : 264330515190

Option 3 ID : 264330515189

Option 4 ID : 264330515187

Status : Answered

Chosen Option : 4

Q.31 A cylinder has some water in it at a height of 16 cm. If a sphere of radius 9 cm is put into it, then find the rise in the height of the water if the radius of the cylinder is 12 cm.

- Ans
- 1. 8 cm
  - 2. 6 cm
  - 3. 8.75 cm
  - 4. 6.75 cm

Question ID : 264330104421

Option 1 ID : 264330409987

Option 2 ID : 264330409985

Option 3 ID : 264330409988

Option 4 ID : 264330409986

Status : Answered

Chosen Option : 4

Q.32 A can do  $\frac{1}{5}$  of a piece of work in 20 days, B can do 30% of the same work in 36 days, while C can do 80% of the same work in 160 days. B and C together started and worked for x days. After x days B left the work, and A joined C and both completed the remaining work in (x - 41) days. If the ratio between the work done by (B + C) together to the work done by (A + C) together is 19 : 6, then what fraction of the same work can be completed by C alone in 2x days?

- Ans
- 1.  $\frac{57}{100}$
  - 2.  $\frac{13}{25}$
  - 3.  $\frac{19}{25}$
  - 4.  $\frac{6}{25}$

Question ID : 264330114533

Option 1 ID : 264330450220

Option 2 ID : 264330450217

Option 3 ID : 264330450219

Option 4 ID : 264330450218

Status : Answered

Chosen Option : 4

Q.33 If the radius of two circles be 6 cm and 9 cm and the length of the transverse common tangent be 20 cm, then find the distance between the two centres.

- Ans  1. 25 cm  
 2. 22 cm  
 3. 24 cm  
 4. 27 cm

Question ID : 264330165540  
Option 1 ID : 264330649241  
Option 2 ID : 264330649239  
Option 3 ID : 264330649240  
Option 4 ID : 264330649242  
Status : Answered  
Chosen Option : 1

Q.34 Nikunj goes 4 kilometres against the current of a stream in 1 hour, and 2 kilometres along the current in 15 minutes. How long will it take him to go 7 kilometres in stationary water?

- Ans  1. 1 hour 15 minutes  
 2. 1 hour 20 minutes  
 3. 1 hour 10 minutes  
 4. 1 hour 5 minutes

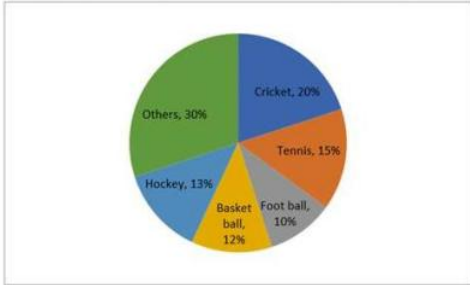
Question ID : 264330103626  
Option 1 ID : 264330406811  
Option 2 ID : 264330406812  
Option 3 ID : 264330406810  
Option 4 ID : 264330406809  
Status : Answered  
Chosen Option : 3

Q.35 At 7: 30 P.M. the owner of a Cycle noticed that a thief is taking away his cycle from his home and is cycling in a particular direction at an estimated speed of 10 km per hour. He informed the police about the theft and the policeman started from the same point, half an hour later than the time of the theft but with a speed of 12 km per hour. At what time will Policeman catch the thief?

- Ans  1. 10:45 P.M.  
 2. 9: 30 P.M.  
 3. 10:00 P.M.  
 4. 10:30 P.M.

Question ID : 26433090262  
Option 1 ID : 264330354528  
Option 2 ID : 264330354525  
Option 3 ID : 264330354526  
Option 4 ID : 264330354527  
Status : Answered  
Chosen Option : 3

Q.36 The pie chart below shows the spendings of a state on various sports during a particular year:



If the total amount spent on sports during the year was ₹75,00,000 then how much (in ₹) was spent on cricket and hockey together?

- Ans
- 1. ₹18,75,000
  - 2. ₹26,80,000
  - 3. ₹24,75,000
  - 4. ₹21,55,000

Question ID : 264330158399

Option 1 ID : 264330620955

Option 2 ID : 264330620958

Option 3 ID : 264330620957

Option 4 ID : 264330620956

Status : Answered

Chosen Option : 3

Q.37 In a  $\triangle ABC$ , the bisectors of angle  $ABC$  and angle  $ACB$  intersect each other at point  $O$ . If the angle  $BOC$  is  $125^\circ$ , then the angle  $BAC$  is equal to:

- Ans
- 1.  $75^\circ$
  - 2.  $78^\circ$
  - 3.  $70^\circ$
  - 4.  $82^\circ$

Question ID : 264330165492

Option 1 ID : 264330649047

Option 2 ID : 264330649049

Option 3 ID : 264330649048

Option 4 ID : 264330649050

Status : Answered

Chosen Option : 3

Q.38 Two trains Mumbai Rajdhani and Kissan Express of lengths 850 m and 700 m are 1050 m apart, and are running on parallel tracks towards each other. Mumbai Rajdhani is running at 62 km/h and Kissan Express is running at 55 km/h. In how much time (in sec) will the trains cross each other?

- Ans
- 1. 70
  - 2. 45
  - 3. 75
  - 4. 80

Question ID : 26433058800

Option 1 ID : 264330230139

Option 2 ID : 264330230137

Option 3 ID : 264330230136

Option 4 ID : 264330230138

Status : Answered

Chosen Option : 4

Q.39 If  $\sin \beta = \frac{1}{3}$ ,  $(\sec \beta - \tan \beta)^2$  is equal to:

- Ans
- 1.  $\frac{3}{4}$
  - 2.  $\frac{2}{3}$
  - 3.  $\frac{1}{2}$
  - 4.  $\frac{1}{3}$

Question ID : 264330145128  
Option 1 ID : 264330568769  
Option 2 ID : 264330568768  
Option 3 ID : 264330568770  
Option 4 ID : 264330568767  
Status : Answered  
Chosen Option : 3

Q.40 A right square pyramid having lateral surface area is  $624 \text{ cm}^2$ . If the length of the diagonal of the square is  $24\sqrt{2}$ , then the volume of the pyramid is:

- Ans
- 1.  $1150 \text{ cm}^3$
  - 2.  $780 \text{ cm}^3$
  - 3.  $1083 \text{ cm}^3$
  - 4.  $960 \text{ cm}^3$

Question ID : 264330123011  
Option 1 ID : 264330482110  
Option 2 ID : 264330482109  
Option 3 ID : 264330482107  
Option 4 ID : 264330482108  
Status : Answered  
Chosen Option : 4

Q.41 The sides of a rectangle are in the ratio of 3 : 8 and its area is  $1944 \text{ cm}^2$ . What is its perimeter?

- Ans
- 1. 189 cm
  - 2. 208 cm
  - 3. 198 cm
  - 4. 308 cm

Question ID : 264330106082  
Option 1 ID : 264330416632  
Option 2 ID : 264330416629  
Option 3 ID : 264330416631  
Option 4 ID : 264330416630  
Status : Answered  
Chosen Option : 3

Q.42 A and B complete a work in 24 and 30 days, respectively, working 10 hours per day. The work is to be done in two shifts. The morning shift is for 6 hours and the evening shift is for 4 hours. On the first day, A works in the morning and B works in the evening, and they interchange their shifts every day. On which day did the work get completed?

- Ans
- 1. 21st day
  - 2. 24th day
  - 3. 30th day
  - 4. 27th day

Question ID : 26433091569

Option 1 ID : 264330359641

Option 2 ID : 264330359642

Option 3 ID : 264330359644

Option 4 ID : 264330359643

Status : Answered

Chosen Option : 4

Q.43 If  $\sin A = \frac{\sqrt{3}}{2}$ ,  $0 < A < 90^\circ$ , then find the value of  $2(\operatorname{cosec} A + \cot A)$ .

- Ans
- 1.  $2\sqrt{3}$
  - 2.  $\sqrt{3}$
  - 3.  $\frac{2}{\sqrt{3}}$
  - 4.  $\frac{1}{\sqrt{3}}$

Question ID : 264330157749

Option 1 ID : 264330618356

Option 2 ID : 264330618355

Option 3 ID : 264330618358

Option 4 ID : 264330618357

Status : Answered

Chosen Option : 1

Q.44 The height and the radius of the base of a right circular cone are in the ratio of 12 : 5. If its volume is  $314 \text{ cm}^3$ , then what is the slant height of the cone? (Use  $\pi = 3.14$ )

- Ans
- 1. 12 cm
  - 2. 11 cm
  - 3. 13 cm
  - 4. 14 cm

Question ID : 264330145134

Option 1 ID : 264330568792

Option 2 ID : 264330568791

Option 3 ID : 264330568793

Option 4 ID : 264330568794

Status : Answered

Chosen Option : 3

Q.45 Three numbers are in the ratio of 5 : 7 : 9 and their LCM is 34,650. Their HCF is:

- Ans
- 1. 315
  - 2. 55
  - 3. 110
  - 4. 99

Question ID : 26433063670  
 Option 1 ID : 264330249293  
 Option 2 ID : 264330249292  
 Option 3 ID : 264330249294  
 Option 4 ID : 264330249295  
 Status : Answered  
 Chosen Option : 3

Q.46 Which is the largest number that divides each of 1036, 1813 and 3885 without leaving any remainder?

- Ans
- 1. 333
  - 2. 111
  - 3. 259
  - 4. 37

Question ID : 264330103225  
 Option 1 ID : 264330405208  
 Option 2 ID : 264330405207  
 Option 3 ID : 264330405206  
 Option 4 ID : 264330405205  
 Status : Answered  
 Chosen Option : 4

Q.47 If  $\sin A = \frac{2}{3}$ , then find the value of  $(7 - \tan A)(3 + \cos A)$ .

- Ans
- 1.  $\frac{61}{3} + \frac{17}{3\sqrt{5}}$
  - 2.  $\frac{61}{3\sqrt{5}} + \frac{17}{3}$
  - 3.  $\frac{61}{3} + \frac{17}{\sqrt{5}}$
  - 4.  $\frac{61}{3} - \frac{17}{3\sqrt{5}}$

Question ID : 264330158301  
 Option 1 ID : 264330620565  
 Option 2 ID : 264330620564  
 Option 3 ID : 264330620566  
 Option 4 ID : 264330620563  
 Status : Answered  
 Chosen Option : 1

Q.48 In an election between two candidates, 20% of the voters on the voters list did not cast their votes and 80 voters cast their ballot papers blank. The winner secured 45% of all the voters in the list and he got 280 votes more than his rival. The number of voters on the list was:

- Ans
- 1. 1500
  - 2. 2800
  - 3. 2500
  - 4. 2000

Question ID : 264330158381  
Option 1 ID : 264330620883  
Option 2 ID : 264330620886  
Option 3 ID : 264330620885  
Option 4 ID : 264330620884  
Status : Answered  
Chosen Option : 4

Q.49 Find the LCM of 73 and 657.

- Ans
- 1. 73
  - 2. 657
  - 3. 146
  - 4. 365

Question ID : 26433065037  
Option 1 ID : 264330254743  
Option 2 ID : 264330254742  
Option 3 ID : 264330254741  
Option 4 ID : 264330254740  
Status : Answered  
Chosen Option : 2

Q.50 In a circle, chords AB and CD intersect internally at E. If  $CD = 18$  cm,  $DE = 5$  cm,  $AE = 13$  cm, then the length of BE is:

- Ans
- 1. 4 cm
  - 2. 7 cm
  - 3. 3 cm
  - 4. 5 cm

Question ID : 264330168755  
Option 1 ID : 264330661832  
Option 2 ID : 264330661833  
Option 3 ID : 264330661831  
Option 4 ID : 264330661834  
Status : Answered  
Chosen Option : 4



Q.1 Select the most appropriate meaning of the given idiom.  
Fit as a fiddle

- Ans  1. To be extremely excited and energetic  
 2. To be in good health  
 3. Something is perfect  
 4. A good and useful invention

Question ID : 264330164175  
Option 1 ID : 264330643953  
Option 2 ID : 264330643951  
Option 3 ID : 264330643954  
Option 4 ID : 264330643952  
Status : Answered  
Chosen Option : 2

Q.2 Select the most appropriate meaning of the underlined word.  
She has become a familiar figure in the world of politics.

- Ans  1. Known  
 2. Legend  
 3. Elevated  
 4. Fancy

Question ID : 264330121037  
Option 1 ID : 264330474356  
Option 2 ID : 264330474357  
Option 3 ID : 264330474358  
Option 4 ID : 264330474355  
Status : Answered  
Chosen Option : 1

Q.3 Select the most appropriate ANTONYM of the given word.  
Authentic

- Ans  1. Genuine  
 2. Fake  
 3. Basic  
 4. Different

Question ID : 264330164169  
Option 1 ID : 264330643927  
Option 2 ID : 264330643930  
Option 3 ID : 264330643928  
Option 4 ID : 264330643929  
Status : Answered  
Chosen Option : 2

Q.4 Select the most appropriate ANTONYM of the given word.  
Inquisitive

- Ans  1. Innocent  
 2. Indifferent  
 3. Curious  
 4. Studios

Question ID : 264330165247  
Option 1 ID : 264330648088  
Option 2 ID : 264330648090  
Option 3 ID : 264330648087  
Option 4 ID : 264330648089  
Status : Not Answered  
Chosen Option : --

Q.5 Select the INCORRECTLY spelt word from the underlined words in the following sentence.

It is important to see school holistically, it is not a set of atomic items of rooms, library, assembly halls, canteen and playgrounds; it is all of these but in symbiotic relationship with each other, the contors of which are often far too obvious and often simply mysterious.

- Ans  1. mysterious  
 2. symbiotic  
 3. contors  
 4. holistically

Question ID : 264330141158  
Option 1 ID : 264330552978  
Option 2 ID : 264330552976  
Option 3 ID : 264330552977  
Option 4 ID : 264330552975  
Status : Answered  
Chosen Option : 3

Q.6 The following sentence has been split into four segments. Identify the segment that contains an error.

Will Ramya / had completed / that work / by 2025?

- Ans  1. by 2025  
 2. that work  
 3. had completed  
 4. Will Ramya

Question ID : 26433088292  
Option 1 ID : 264330346764  
Option 2 ID : 264330346763  
Option 3 ID : 264330346762  
Option 4 ID : 264330346761  
Status : Answered  
Chosen Option : 3

Q.7 Select the most appropriate meaning of the given idiom.  
Apple of discord

- Ans
- 1. Practical
  - 2. Distant love
  - 3. Bone of contention
  - 4. Centre of attraction

Question ID : 264330141095  
Option 1 ID : 264330552730  
Option 2 ID : 264330552729  
Option 3 ID : 264330552727  
Option 4 ID : 264330552728  
Status : Answered  
Chosen Option : 3

Q.8 Fill in the blank by selecting the meaningful and correctly spelt word from the given options.

They knew that the stock of the food was getting reduced and the fund \_\_\_\_\_ for that was not enough for the next week.

- Ans
- 1. asserted
  - 2. allotted
  - 3. alerted
  - 4. abandoned

Question ID : 26433059538  
Option 1 ID : 264330233000  
Option 2 ID : 264330233003  
Option 3 ID : 264330233001  
Option 4 ID : 264330233002  
Status : Answered  
Chosen Option : 2

Q.9 Select the most appropriate option that can substitute the underlined segment in the given sentence. If there is no need to substitute it, select 'No substitution required'  
The unexpected turn beside the project put the company in a big financial crisis.

- Ans
- 1. in the project
  - 2. until the project
  - 3. No substitution required
  - 4. between the project

Question ID : 264330117212  
Option 1 ID : 264330460909  
Option 2 ID : 264330460911  
Option 3 ID : 264330460912  
Option 4 ID : 264330460910  
Status : Answered  
Chosen Option : 1

Q.10 Select the most appropriate option that can substitute the underlined segment in the given sentence.  
We all should respect each other.

- Ans
- 1. every other
  - 2. all other
  - 3. one another
  - 4. all of us

Question ID : 26433084644  
Option 1 ID : 264330332346  
Option 2 ID : 264330332347  
Option 3 ID : 264330332345  
Option 4 ID : 264330332348  
Status : Answered  
Chosen Option : 3

Q.11 Select the most appropriate one-word substitution of the given group of words.

A form of government in which the supreme power is vested in the people and exercised by their elected agents under a free electoral system.

- Ans
- 1. Democracy
  - 2. Anarchy
  - 3. Monarchy
  - 4. Autocracy

Question ID : 26433090856  
Option 1 ID : 264330356834  
Option 2 ID : 264330356835  
Option 3 ID : 264330356836  
Option 4 ID : 264330356833  
Status : Answered  
Chosen Option : 1

Q.12 Select the most appropriate meaning of the given idiom.

Come what may

- Ans
- 1. To be among the latest
  - 2. No matter what happens
  - 3. To get frightened
  - 4. Meeting someone

Question ID : 26433091883  
Option 1 ID : 264330360871  
Option 2 ID : 264330360870  
Option 3 ID : 264330360872  
Option 4 ID : 264330360869  
Status : Answered  
Chosen Option : 2

Q.13 Select the most appropriate option that can substitute the underlined segment in the given sentence.

The decision to engage in an armed conflict is tacit.

- Ans
- 1. incomprehensible for some
  - 2. ineffective completely
  - 3. regretted by everyone
  - 4. implied without being stated

Question ID : 26433099887  
Option 1 ID : 264330392140  
Option 2 ID : 264330392138  
Option 3 ID : 264330392137  
Option 4 ID : 264330392139  
Status : Answered  
Chosen Option : 4

Q.14 The following sentence has been divided into parts. One of them may contain an error. Select the part that contains the error from the given options. If you don't find any error, mark 'No error' as your answer.

My elder brother / yesterday had took / my Facebook password.

- Ans
- 1. my Facebook password
  - 2. yesterday had took
  - 3. My elder brother
  - 4. No error

Question ID : 26433073526  
Option 1 ID : 264330288254  
Option 2 ID : 264330288253  
Option 3 ID : 264330288252  
Option 4 ID : 264330288255  
Status : Answered  
Chosen Option : 2

Q.15 Select the option that can be used as a one-word substitute for the given group of words.

To tell the nature of a disease by its symptoms.

- Ans
- 1. Design
  - 2. Diagnosis
  - 3. Decisive
  - 4. Dosage

Question ID : 26433088804  
Option 1 ID : 264330348771  
Option 2 ID : 264330348770  
Option 3 ID : 264330348769  
Option 4 ID : 264330348772  
Status : Answered  
Chosen Option : 2

Q.16 Select the most appropriate meaning of the given idiom.

Fit as a fiddle

- Ans
- 1. At the last moment
  - 2. To ignore what someone is saying
  - 3. To betray a close person
  - 4. In good health

Question ID : 26433091831  
Option 1 ID : 264330360662  
Option 2 ID : 264330360663  
Option 3 ID : 264330360664  
Option 4 ID : 264330360661  
Status : Answered  
Chosen Option : 4

Q.17 The following sentence has been split into four segments. Identify the segment that contains a grammatical error.

The students / are expected / to come / in the right time.

- Ans
- 1. in the right time
  - 2. The students
  - 3. to come
  - 4. are expected

Question ID : 264330145283  
Option 1 ID : 264330569390  
Option 2 ID : 264330569387  
Option 3 ID : 264330569389  
Option 4 ID : 264330569388  
Status : Answered  
Chosen Option : 1

Q.18 Select the option that best expresses the meaning of the underlined idiom.  
Christy should discuss this with her face to face.

- Ans
- 1. With another person in their presence rather than, say, by phone or letter
  - 2. Come to fully accept or understand something
  - 3. Remained normal and realistic
  - 4. Almost always

Question ID : 264330136000  
Option 1 ID : 264330532841  
Option 2 ID : 264330532839  
Option 3 ID : 264330532842  
Option 4 ID : 264330532840  
Status : Answered  
Chosen Option : 1

Q.19 Select the most appropriate option that can substitute the underlined segment in the given sentence.

The book narrated the athlete's prowess in a lucid manner.

- Ans
- 1. refined arguments
  - 2. exceptional mastery
  - 3. difficult situation
  - 4. affluent days

Question ID : 26433099883  
 Option 1 ID : 264330392123  
 Option 2 ID : 264330392121  
 Option 3 ID : 264330392122  
 Option 4 ID : 264330392124  
 Status : Not Answered  
 Chosen Option : --

Q.20 Select the most appropriate meaning of the underlined word.  
 She has no desire for money.

- Ans
- 1. Disgust
  - 2. Despise
  - 3. Care
  - 4. Wish

Question ID : 264330121036  
 Option 1 ID : 264330474352  
 Option 2 ID : 264330474351  
 Option 3 ID : 264330474354  
 Option 4 ID : 264330474353  
 Status : Answered  
 Chosen Option : 4

Q.21 Select the most appropriate meaning of the underlined phrase.  
 She can't make up her mind where to go for her summer vacation.

- Ans
- 1. Decide between alternatives or come to a decision
  - 2. Decide on a suitable parlour
  - 3. Decide how to do her makeup
  - 4. Engage her mind in creative activities

Question ID : 264330139841  
 Option 1 ID : 264330547760  
 Option 2 ID : 264330547761  
 Option 3 ID : 264330547759  
 Option 4 ID : 264330547762  
 Status : Answered  
 Chosen Option : 1

Q.22 Select the most appropriate ANTONYM of the underlined word.  
He is so stingy that I have never seen him spending money on basic necessities.

- Ans
- 1. Wicked
  - 2. Extravagant
  - 3. Obnoxious
  - 4. Indecent

Question ID : 264330121873  
Option 1 ID : 264330477652  
Option 2 ID : 264330477654  
Option 3 ID : 264330477651  
Option 4 ID : 264330477653  
Status : Answered  
Chosen Option : 2

Q.23 Select the option that can be used as a one-word substitute for the given group of words.  
A book published after author's death.

- Ans
- 1. Posthuman publication
  - 2. Posthumous publication
  - 3. Supernatural publication
  - 4. Predecessor publication

Question ID : 26433088809  
Option 1 ID : 264330348789  
Option 2 ID : 264330348790  
Option 3 ID : 264330348791  
Option 4 ID : 264330348792  
Status : Answered  
Chosen Option : 2

Q.24 Select the most appropriate synonym of the given word.  
Rehabilitate

- Ans
- 1. Reinstall
  - 2. Develop
  - 3. Absolve
  - 4. Decline

Question ID : 264330117194  
Option 1 ID : 264330460837  
Option 2 ID : 264330460840  
Option 3 ID : 264330460838  
Option 4 ID : 264330460839  
Status : Answered  
Chosen Option : 4



**Q.25** Select the most appropriate option that can substitute the underlined segment in the given sentence.  
You can become confident to speak English within one year.

- Ans
- 1. convinced to speaking
  - 2. reassured of speaking
  - 3. assured of speaking
  - 4. confident in speaking

Question ID : 26433098973  
 Option 1 ID : 264330388542  
 Option 2 ID : 264330388543  
 Option 3 ID : 264330388541  
 Option 4 ID : 264330388544  
 Status : Answered  
 Chosen Option : 4

**Q.26** Select the option that can be used as a one-word substitute for the given group of words.

Centre of public attention

- Ans
- 1. Ambiguity
  - 2. Obscurity
  - 3. Fuzziness
  - 4. Limelight

Question ID : 26433088968  
 Option 1 ID : 264330349412  
 Option 2 ID : 264330349409  
 Option 3 ID : 264330349411  
 Option 4 ID : 264330349410  
 Status : Answered  
 Chosen Option : 4

**Q.27** The following sentence has been divided into parts. One of them may contain an error. Select the part that contains the error from the given options. If you don't find any error, mark 'No error' as your answer.  
We will / have been know the result / of the CAT exam by next week.

- Ans
- 1. of the CAT exam by next week
  - 2. We will
  - 3. have been know the result
  - 4. No error

Question ID : 26433059005  
 Option 1 ID : 264330230910  
 Option 2 ID : 264330230908  
 Option 3 ID : 264330230909  
 Option 4 ID : 264330230911  
 Status : Answered  
 Chosen Option : 3

Q.28 Select the most appropriate meaning of the given idiom.  
Break a leg

- Ans  1. To hurt someone  
 2. To avoid someone  
 3. To wish someone good luck  
 4. To love someone

Question ID : 264330117234  
Option 1 ID : 264330460993  
Option 2 ID : 264330460994  
Option 3 ID : 264330460995  
Option 4 ID : 264330460996  
Status : Answered  
Chosen Option : 3

Q.29 Select the most appropriate meaning of the given idiom.  
To hit the nail on the head

- Ans  1. To hit something accurately  
 2. To be indecisive  
 3. To miss an opportunity  
 4. To express an idea with great precision

Question ID : 264330140553  
Option 1 ID : 264330550568  
Option 2 ID : 264330550570  
Option 3 ID : 264330550569  
Option 4 ID : 264330550567  
Status : Answered  
Chosen Option : 4

Q.30 Select the most appropriate option that can substitute the underlined segment in the given sentence.

Rajib's habit of sneering at the beliefs of others often hurts others' sentiments.

- Ans  1. manipulation  
 2. cynicism  
 3. certainty  
 4. cleverness

Question ID : 26433070593  
Option 1 ID : 264330276837  
Option 2 ID : 264330276839  
Option 3 ID : 264330276836  
Option 4 ID : 264330276838  
Status : Answered  
Chosen Option : 2

Q.31 Select the most appropriate option that can substitute the underlined segment in the given sentence. If there is no need to substitute it, select 'No substitution required'.  
Politics and money go together in this country.

- Ans
- 1. go arm in arm
  - 2. go holding hands
  - 3. go hand in hand
  - 4. No substitution required

Question ID : 264330117195  
Option 1 ID : 264330460842  
Option 2 ID : 264330460841  
Option 3 ID : 264330460843  
Option 4 ID : 264330460844  
Status : Answered  
Chosen Option : 1

Q.32 Select the most appropriate ANTONYM of the underlined word in the given sentence.

After losing his job and his home, he found himself destitute and living on the streets.

- Ans
- 1. glorious
  - 2. disturbed
  - 3. affluent
  - 4. ridiculous

Question ID : 264330164568  
Option 1 ID : 264330645460  
Option 2 ID : 264330645462  
Option 3 ID : 264330645461  
Option 4 ID : 264330645459  
Status : Answered  
Chosen Option : 3

Q.33 Select the most appropriate synonym of the highlighted word in the given sentence.

The plane crash was a harrowing experience for everyone involved.

- Ans
- 1. Exterminate
  - 2. Excruciating
  - 3. Awesome
  - 4. Sad

Question ID : 264330108891  
Option 1 ID : 264330427844  
Option 2 ID : 264330427841  
Option 3 ID : 264330427842  
Option 4 ID : 264330427843  
Status : Not Answered  
Chosen Option : --

Q.34 Identify the option that rectifies the spelling of the incorrectly spelt word in the given sentence.

Students should have a good vocabulary to write an essay efectively.

- Ans
- 1. Gud
  - 2. Effectively
  - 3. Write
  - 4. Voicabulary

Question ID : 26433089015  
Option 1 ID : 264330349600  
Option 2 ID : 264330349597  
Option 3 ID : 264330349599  
Option 4 ID : 264330349598  
Status : Answered  
Chosen Option : 2

Q.35 Select the most appropriate synonym of the word 'factual' in the given sentence and choose the correct option.

The scientist's hypothesis was based on empirical evidence and rigorous experimentation.

- Ans
- 1. Rigorous
  - 2. Hypothesis
  - 3. Evidence
  - 4. Empirical

Question ID : 264330163535  
Option 1 ID : 264330641397  
Option 2 ID : 264330641395  
Option 3 ID : 264330641398  
Option 4 ID : 264330641396  
Status : Answered  
Chosen Option : 3

Q.36 Select the INCORRECTLY spelt word in the given sentence.

It is beyond my cognitive capacity to solve the mathematical problems.

- Ans
- 1. problems
  - 2. cognitive
  - 3. mathematical
  - 4. capacity

Question ID : 264330163432  
Option 1 ID : 264330641005  
Option 2 ID : 264330641003  
Option 3 ID : 264330641004  
Option 4 ID : 264330641006  
Status : Answered  
Chosen Option : 2

Q.37 Select the most appropriate option that can substitute the underlined word which has been incorrectly spelt.  
Mrs. Lal taught me English gramar.

- Ans  1. grammar  
 2. gramarr  
 3. gramerr  
 4. gramer

Question ID : 264330123044  
Option 1 ID : 264330482241  
Option 2 ID : 264330482239  
Option 3 ID : 264330482240  
Option 4 ID : 264330482242  
Status : Answered  
Chosen Option : 1

Q.38 Select the most appropriate meaning of the underlined idiom.  
Sanchit stands by his friends through thick and thin .

- Ans  1. In winter and summer  
 2. In favourable situations  
 3. In crowded areas  
 4. Under all circumstances

Question ID : 264330122977  
Option 1 ID : 264330481974  
Option 2 ID : 264330481972  
Option 3 ID : 264330481973  
Option 4 ID : 264330481971  
Status : Answered  
Chosen Option : 4

Q.39 Select the option that can be used as a one-word substitute for the given phrase.

One who goes from place to place, begging

- Ans  1. Misogamist  
 2. Malleable  
 3. Meticulous  
 4. Mendicant

Question ID : 26433073742  
Option 1 ID : 264330289111  
Option 2 ID : 264330289110  
Option 3 ID : 264330289109  
Option 4 ID : 264330289108  
Status : Answered  
Chosen Option : 3

Q.40 Select the most appropriate synonym of the given word.

Reminiscence

- Ans  1. Harsh  
 2. Remembrance  
 3. Benevolence  
 4. Oblivion

Question ID : 264330163372

Option 1 ID : 264330640776

Option 2 ID : 264330640778

Option 3 ID : 264330640775

Option 4 ID : 264330640777

Status : Not Answered

Chosen Option : --

Comprehension:

In the following passage some words have been deleted. Read the passage carefully and select the most appropriate option to fill in each blank.

Swans are large waterbirds that (1) \_\_\_\_\_ to the family Anatidae, which also includes ducks and geese. They (2) \_\_\_\_\_ for their beauty and grace and are often used as symbols of love, fidelity, and elegance. They are also famous for their (3) \_\_\_\_\_ features, such as their long necks, large wingspans, and striking white feathers. (4) \_\_\_\_\_, not all swan species are white; the Black Swan, (5) \_\_\_\_\_, has black feathers with a red bill. Swans are found on every continent and are known for their strong pair bonds. They mate for life and can live up to 20 years.

SubQuestion No : 41

Q.41 Select the most appropriate option to fill in blank number 1.

- Ans  1. belonged  
 2. belonging  
 3. belong  
 4. belongs

Question ID : 264330163346

Option 1 ID : 264330640678

Option 2 ID : 264330640677

Option 3 ID : 264330640676

Option 4 ID : 264330640675

Status : Answered

Chosen Option : 3

**Comprehension:**

In the following passage some words have been deleted. Read the passage carefully and select the most appropriate option to fill in each blank.

Swans are large waterbirds that (1) \_\_\_\_\_ to the family Anatidae, which also includes ducks and geese. They (2) \_\_\_\_\_ for their beauty and grace and are often used as symbols of love, fidelity, and elegance. They are also famous for their (3) \_\_\_\_\_ features, such as their long necks, large wingspans, and striking white feathers. (4) \_\_\_\_\_, not all swan species are white; the Black Swan, (5) \_\_\_\_\_, has black feathers with a red bill. Swans are found on every continent and are known for their strong pair bonds. They mate for life and can live up to 20 years.

**SubQuestion No : 42**

**Q.42** Select the most appropriate option to fill in blank number 2.

- Ans
- 1. were known
  - 2. have knowing
  - 3. had know
  - 4. are known

Question ID : 264330163347

Option 1 ID : 264330640680

Option 2 ID : 264330640681

Option 3 ID : 264330640682

Option 4 ID : 264330640679

Status : Answered

Chosen Option : 4

**Comprehension:**

In the following passage some words have been deleted. Read the passage carefully and select the most appropriate option to fill in each blank.

Swans are large waterbirds that (1) \_\_\_\_\_ to the family Anatidae, which also includes ducks and geese. They (2) \_\_\_\_\_ for their beauty and grace and are often used as symbols of love, fidelity, and elegance. They are also famous for their (3) \_\_\_\_\_ features, such as their long necks, large wingspans, and striking white feathers. (4) \_\_\_\_\_, not all swan species are white; the Black Swan, (5) \_\_\_\_\_, has black feathers with a red bill. Swans are found on every continent and are known for their strong pair bonds. They mate for life and can live up to 20 years.

**SubQuestion No : 43**

**Q.43** Select the most appropriate option to fill in blank number 3.

- Ans
- 1. finite
  - 2. similar
  - 3. popular
  - 4. distinctive

Question ID : 264330163348

Option 1 ID : 264330640685

Option 2 ID : 264330640683

Option 3 ID : 264330640684

Option 4 ID : 264330640686

Status : Answered

Chosen Option : 4

**Comprehension:**

In the following passage some words have been deleted. Read the passage carefully and select the most appropriate option to fill in each blank.

Swans are large waterbirds that (1) \_\_\_\_\_ to the family Anatidae, which also includes ducks and geese. They (2) \_\_\_\_\_ for their beauty and grace and are often used as symbols of love, fidelity, and elegance. They are also famous for their (3) \_\_\_\_\_ features, such as their long necks, large wingspans, and striking white feathers. (4) \_\_\_\_\_, not all swan species are white; the Black Swan, (5) \_\_\_\_\_, has black feathers with a red bill.

Swans are found on every continent and are known for their strong pair bonds. They mate for life and can live up to 20 years.

**SubQuestion No : 44**

**Q.44** Select the most appropriate option to fill in blank number 4.

- Ans  1. Consequently  
 2. Because  
 3. Formerly  
 4. However

Question ID : 264330163349

Option 1 ID : 264330640689

Option 2 ID : 264330640690

Option 3 ID : 264330640687

Option 4 ID : 264330640688

Status : Answered

Chosen Option : 4

**Comprehension:**

In the following passage some words have been deleted. Read the passage carefully and select the most appropriate option to fill in each blank.

Swans are large waterbirds that (1) \_\_\_\_\_ to the family Anatidae, which also includes ducks and geese. They (2) \_\_\_\_\_ for their beauty and grace and are often used as symbols of love, fidelity, and elegance. They are also famous for their (3) \_\_\_\_\_ features, such as their long necks, large wingspans, and striking white feathers. (4) \_\_\_\_\_, not all swan species are white; the Black Swan, (5) \_\_\_\_\_, has black feathers with a red bill.

Swans are found on every continent and are known for their strong pair bonds. They mate for life and can live up to 20 years.

**SubQuestion No : 45**

**Q.45** Select the most appropriate option to fill in blank number 5.

- Ans  1. for example  
 2. of course  
 3. after all  
 4. in addition

Question ID : 264330163350

Option 1 ID : 264330640693

Option 2 ID : 264330640694

Option 3 ID : 264330640691

Option 4 ID : 264330640692

Status : Answered

Chosen Option : 4



**Comprehension:**

Read the given passage carefully and answer the questions that follow.

As the world's population approaches 8 billion and resource use intensifies, pollution is ever more extensive, pervasive, and persistent. It affects our health through the food we eat, the water we drink and the air we breathe. By 2025, the world's cities will produce 2.2 billion tonnes of waste every year, more than three times the amount produced in 2009. That said, pollution is not a new phenomenon and is largely controllable and often avoidable, as shown in some countries and cities that have succeeded in decoupling economic growth from pollution and waste accumulation.

With the end goal to eradicate all forms of pollution by 2030, the UN Environment Programme was tasked by the UN Environment Assembly to coordinate the implementation of a global plan reiterating that pollution is not only an environmental priority, it's a priority for the achievement of the Sustainable Development Goals.

**SubQuestion No : 46**

**Q.46** Which is the best description of the tone of the passage?

- Ans
- 1. Technical
  - 2. Sarcastic
  - 3. Dogmatic
  - 4. Humanistic

Question ID : 264330164714

Option 1 ID : 264330646009

Option 2 ID : 264330646008

Option 3 ID : 264330646010

Option 4 ID : 264330646007

Status : Answered

Chosen Option : 4

**Comprehension:**

Read the given passage carefully and answer the questions that follow.

As the world's population approaches 8 billion and resource use intensifies, pollution is ever more extensive, pervasive, and persistent. It affects our health through the food we eat, the water we drink and the air we breathe. By 2025, the world's cities will produce 2.2 billion tonnes of waste every year, more than three times the amount produced in 2009. That said, pollution is not a new phenomenon and is largely controllable and often avoidable, as shown in some countries and cities that have succeeded in decoupling economic growth from pollution and waste accumulation.

With the end goal to eradicate all forms of pollution by 2030, the UN Environment Programme was tasked by the UN Environment Assembly to coordinate the implementation of a global plan reiterating that pollution is not only an environmental priority, it's a priority for the achievement of the Sustainable Development Goals.

**SubQuestion No : 47**

**Q.47** Which of the following most accurately states the central idea of the passage?

- Ans
- 1. United Nations
  - 2. Pollution free planet
  - 3. Population explosion
  - 4. Economic growth

Question ID : 264330164713

Option 1 ID : 264330646003

Option 2 ID : 264330646006

Option 3 ID : 264330646005

Option 4 ID : 264330646004

Status : Answered

Chosen Option : 2

**Comprehension:**

Read the given passage carefully and answer the questions that follow.

As the world's population approaches 8 billion and resource use intensifies, pollution is ever more extensive, pervasive, and persistent. It affects our health through the food we eat, the water we drink and the air we breathe. By 2025, the world's cities will produce 2.2 billion tonnes of waste every year, more than three times the amount produced in 2009. That said, pollution is not a new phenomenon and is largely controllable and often avoidable, as shown in some countries and cities that have succeeded in decoupling economic growth from pollution and waste accumulation.

With the end goal to eradicate all forms of pollution by 2030, the UN Environment Programme was tasked by the UN Environment Assembly to coordinate the implementation of a global plan reiterating that pollution is not only an environmental priority, it's a priority for the achievement of the Sustainable Development Goals.

**SubQuestion No : 48**

**Q.48** Which of the following represents the structure of the passage?

- Ans  1. Definition  
 2. Cause-effect  
 3. Critique  
 4. Chronology

Question ID : 264330164716

Option 1 ID : 264330646016

Option 2 ID : 264330646015

Option 3 ID : 264330646018

Option 4 ID : 264330646017

Status : Answered

Chosen Option : 2

**Comprehension:**

Read the given passage carefully and answer the questions that follow.

As the world's population approaches 8 billion and resource use intensifies, pollution is ever more extensive, pervasive, and persistent. It affects our health through the food we eat, the water we drink and the air we breathe. By 2025, the world's cities will produce 2.2 billion tonnes of waste every year, more than three times the amount produced in 2009. That said, pollution is not a new phenomenon and is largely controllable and often avoidable, as shown in some countries and cities that have succeeded in decoupling economic growth from pollution and waste accumulation.

With the end goal to eradicate all forms of pollution by 2030, the UN Environment Programme was tasked by the UN Environment Assembly to coordinate the implementation of a global plan reiterating that pollution is not only an environmental priority, it's a priority for the achievement of the Sustainable Development Goals.

**SubQuestion No : 49**

**Q.49** What is the ANTONYM for the word 'pervasive' from the passage?

- Ans  1. Clear  
 2. Emotional  
 3. Limited  
 4. Offensive

Question ID : 264330164715

Option 1 ID : 264330646014

Option 2 ID : 264330646013

Option 3 ID : 264330646012

Option 4 ID : 264330646011

Status : Answered

Chosen Option : 3

**Comprehension:**

Read the given passage carefully and answer the questions that follow.

As the world's population approaches 8 billion and resource use intensifies, pollution is ever more extensive, pervasive, and persistent. It affects our health through the food we eat, the water we drink and the air we breathe. By 2025, the world's cities will produce 2.2 billion tonnes of waste every year, more than three times the amount produced in 2009. That said, pollution is not a new phenomenon and is largely controllable and often avoidable, as shown in some countries and cities that have succeeded in decoupling economic growth from pollution and waste accumulation.

With the end goal to eradicate all forms of pollution by 2030, the UN Environment Programme was tasked by the UN Environment Assembly to coordinate the implementation of a global plan reiterating that pollution is not only an environmental priority, it's a priority for the achievement of the Sustainable Development Goals.

**SubQuestion No : 50**

**Q.50** What is the ANTONYM for the word 'priority' from the passage?

Ans  1. Factor

2. Last

3. Part

4. Task

Question ID : 264330164717

Option 1 ID : 264330646021

Option 2 ID : 264330646019

Option 3 ID : 264330646022

Option 4 ID : 264330646020

Status : Answered

Chosen Option : 2