

**Sub Inspector in Delhi Police and Central Armed Police Forces Examination 2023
Paper I**

Roll Number	
Candidate Name	
Venue Name	
Exam Date	03/10/2023
Exam Time	4:00 PM - 6:00 PM
Subject	SICPO Paper I 2023

Section : General Intelligence and Reasoning

Q.1 Select the option that represents the letters that, when sequentially placed from left to right in the blanks below, will complete the letter series.

L _ _ A _ _ S _ _ K _ _ L _ _ A

- Ans
- 1. ASLKALSAKA
 - 2. KSKKALSAKA
 - 3. KSLKALSAKS
 - 4. KSLKALSAKA

Question ID : 26433079375
 Option 1 ID : 264330311491
 Option 2 ID : 264330311489
 Option 3 ID : 264330311490
 Option 4 ID : 264330311488
 Status : Answered
 Chosen Option : 3

Q.2 Select the set in which the numbers are related in the same way as the numbers of the given sets.

(NOTE : Operations should be performed on the whole numbers, without breaking down the numbers into its constituent digits. E.g. 13 – Operations on 13 such as adding /subtracting /multiplying etc. to 13 can be performed. Breaking down 13 into 1 and 3 and then performing mathematical operations on 1 and 3 is not allowed.)
 (6, 8, 106)
 (7, 11, 177)

- Ans
- 1. (8, 7, 119)
 - 2. (9, 8, 154)
 - 3. (5, 9, 101)
 - 4. (7, 9, 136)

Question ID : 26433069114
 Option 1 ID : 264330270971
 Option 2 ID : 264330270969
 Option 3 ID : 264330270970
 Option 4 ID : 264330270968
 Status : Answered
 Chosen Option : 2

Test Prime

ALL EXAMS,
ONE SUBSCRIPTION



40,000+
Mock Tests



Personalised
Report Card



Unlimited
Re-Attempt



500+
Exam Covered



Previous Year
Papers

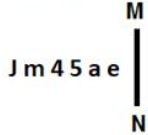


500%
Refund



DOWNLOAD NOW

Q.3 Select the correct mirror image of the given figure when the mirror is placed at MN as shown.




- Ans
- ✓ 1.
 - ✗ 2.
 - ✗ 3.
 - ✗ 4.

Question ID : 26433055953
 Option 1 ID : 264330218798
 Option 2 ID : 264330218799
 Option 3 ID : 264330218796
 Option 4 ID : 264330218797
 Status : Answered
 Chosen Option : 1

Q.4 A @ B means 'A is the husband of B'
 A & B means 'A is the mother of B'
 A # B means 'A is the daughter of B'
 If D & G @ F & E @ H, then how is G related to H?

- Ans
- ✓ 1. Husband's father
 - ✗ 2. Husband's mother
 - ✗ 3. Mother
 - ✗ 4. Father



Question ID : 264330126023
 Option 1 ID : 264330493765
 Option 2 ID : 264330493764
 Option 3 ID : 264330493767
 Option 4 ID : 264330493766
 Status : Answered
 Chosen Option : 1

Q.5 In a certain code language, 'TOWER' is written as 'INGYL' and 'SIGHT' is written as 'JTWVJ'. How will 'BRING' be written in that language?

- Ans
- ✗ 1. LWYDB
 - ✗ 2. ACTBE
 - ✗ 3. KRPJS
 - ✓ 4. AKUPW

Question ID : 26433074756
 Option 1 ID : 264330293115
 Option 2 ID : 264330293114
 Option 3 ID : 264330293112
 Option 4 ID : 264330293113
 Status : Not Attempted and Marked For Review
 Chosen Option : --

Q.6 If 'x' means '-', '+' means '÷', '-' means '+', and '÷' means 'x', what will be the value of the following expression?
 $40 + \{[(24 - 12) \times (2 \div 2)] + (18 \times 10)\}$

- Ans 1. 10
 2. 20
 3. 1
 4. 5

Question ID : 264330129641
 Option 1 ID : 264330507932
 Option 2 ID : 264330507933
 Option 3 ID : 264330507930
 Option 4 ID : 264330507931
 Status : Answered
 Chosen Option : 1

Q.7 In this question, three statements are given, followed by two conclusions numbered I and II. Assuming the statements to be true, even if they seem to be at variance with commonly known facts, decide which of the conclusions logically follows/follow from the statements.

Statements:

- I. No dean is a teacher.
 II. All teachers are professors.
 III. No professor is a lecturer.

Conclusions:

- I. Some deans are lecturers.
 II. Some teachers are lecturers.

- Ans 1. Only conclusion II follows
 2. Only conclusion I follows
 3. Both conclusions I and II follow
 4. Neither conclusion I nor II follows

Question ID : 264330104076
 Option 1 ID : 264330408606
 Option 2 ID : 264330408605
 Option 3 ID : 264330408607
 Option 4 ID : 264330408608
 Status : Answered
 Chosen Option : 4

Q.8 Select the correct combination of mathematical signs to sequentially replace the * signs and to balance the given equation.
 $42 * 7 * 3 * 2 * 13 * 7$

- Ans 1. ÷, x, -, =, x
 2. +, =, ÷, x, +
 3. ÷, x, =, +, +
 4. ÷, x, +, =, +

Question ID : 264330132053
 Option 1 ID : 264330517309
 Option 2 ID : 264330517308
 Option 3 ID : 264330517307
 Option 4 ID : 264330517310
 Status : Answered
 Chosen Option : 4

Q.9 In a certain code language, 'Here we go' is coded as 'asa te du' and 'We can go' is coded as 'du mu asa'. What is the code for the word 'Here'?

- Ans
- 1. mu
 - 2. asa
 - 3. du
 - 4. te

Question ID : 26433074768
Option 1 ID : 264330293163
Option 2 ID : 264330293160
Option 3 ID : 264330293162
Option 4 ID : 264330293161
Status : Answered
Chosen Option : 4

Q.10 Three of the following letter-clusters are alike in some manner and one is different. Select the one that is different.

- Ans
- 1. QJPK
 - 2. KOLN
 - 3. MQNP
 - 4. XBYA

Question ID : 264330145348
Option 1 ID : 264330569648
Option 2 ID : 264330569647
Option 3 ID : 264330569650
Option 4 ID : 264330569649
Status : Answered
Chosen Option : 1

Q.11 Select the correct option that indicates the arrangement of the given words in the order in which they appear in an English dictionary.

1. Glory
2. Glossary
3. Globe
4. Gloss
5. Glow
6. Gloomy

- Ans
- 1. 3, 1, 6, 4, 2, 5
 - 2. 3, 6, 1, 2, 4, 5
 - 3. 3, 6, 1, 4, 2, 5
 - 4. 6, 3, 1, 4, 2, 5

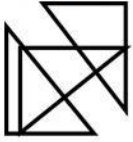
Question ID : 264330145378
Option 1 ID : 264330569768
Option 2 ID : 264330569770
Option 3 ID : 264330569767
Option 4 ID : 264330569769
Status : Answered
Chosen Option : 3

Q.12 If '+' means '-', '-' means '+', '÷' means 'x' and 'x' means '+', then what will come in place of the (?) in the following equation?
 $15 \div 405 - 3 + 25 \times 5 = ?$

- Ans
- 1. 1890
 - 2. 2000
 - 3. 2005
 - 4. 1889

Question ID : 264330114251
 Option 1 ID : 264330449091
 Option 2 ID : 264330449089
 Option 3 ID : 264330449090
 Option 4 ID : 264330449092
 Status : Answered
 Chosen Option : 3

Q.13 Select the option that is embedded in the given figure as its part (rotation is NOT allowed)



Ans

- 1.
- 2.
- 3.
- 4.



Question ID : 264330145468
 Option 1 ID : 264330570127
 Option 2 ID : 264330570130
 Option 3 ID : 264330570129
 Option 4 ID : 264330570128
 Status : Answered
 Chosen Option : 3

Q.14 Two statements are given, followed by two conclusions numbered I and II. Assuming the statements to be true, even if they seem to be at variance with commonly known facts, decide which of the conclusions logically follow(s) from the statements.

Statements:

All cupboards are shelves.

All shelves are drawers.

Conclusions:

I. All cupboards are drawers.

II. All drawers are shelves.

- Ans
- 1. Neither conclusion I nor II follows
 - 2. Both conclusions I and II follow
 - 3. Only conclusion II follows
 - 4. Only conclusion I follows

Question ID : 26433056710

Option 1 ID : 264330221827

Option 2 ID : 264330221826

Option 3 ID : 264330221825

Option 4 ID : 264330221824

Status : Answered

Chosen Option : 4

Q.15 Which of the following terms will replace the question mark (?) in the given series?
WWVU , USTQ , ? , QKPI , OGN E

- Ans
- 1. SQRM
 - 2. SORW
 - 3. SORM
 - 4. SROM

Question ID : 264330102491

Option 1 ID : 264330402396

Option 2 ID : 264330402395

Option 3 ID : 264330402393

Option 4 ID : 264330402394

Status : Answered

Chosen Option : 3

Q.16 In a certain code language, 'CARD' is coded as '3597' and 'DOGS' is coded as '8346'.
What is the code for 'D' in the given code language?

- Ans
- 1. 4
 - 2. 9
 - 3. 5
 - 4. 3

Question ID : 264330169656

Option 1 ID : 264330665325

Option 2 ID : 264330665324

Option 3 ID : 264330665323

Option 4 ID : 264330665326

Status : Answered

Chosen Option : 4

Q.17 Which figure from the given options would replace the question mark (?) if the following figure series were to be continued?

X	O	Δ	T	X	O	Δ	T	?
	S		C	□		∩		
T	Δ	O	X	T	Δ	O	X	

Ans

✗ 1.

X	O
	∩
T	Δ

✗ 2.

Δ	O
	P
T	X

✓ 3.

X	O
	P
T	Δ

✗ 4.

X	T
	P
O	Δ



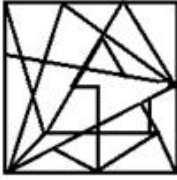
Question ID : 264330145484
 Option 1 ID : 264330570192
 Option 2 ID : 264330570191
 Option 3 ID : 264330570193
 Option 4 ID : 264330570194
 Status : Answered
 Chosen Option : 3

Q.18 Select the option figure in which the given figure is embedded (rotation is NOT allowed).

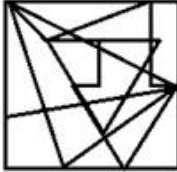


Ans

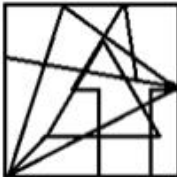
✗ 1.



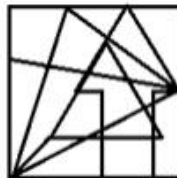
✗ 2.



✗ 3.



✓ 4.



Question ID : 264330145472
 Option 1 ID : 264330570146
 Option 2 ID : 264330570145
 Option 3 ID : 264330570144
 Option 4 ID : 264330570143

Status : Answered

Chosen Option : 4

Q.19 In a certain code language, 'BED' is coded as 9 and 'TABLE' is coded as 25. How will 'RECLINER' be coded in the same language?

Ans ✗ 1. 58

✗ 2. 72

✗ 3. 36

✓ 4. 64

Question ID : 264330132207
 Option 1 ID : 264330517926
 Option 2 ID : 264330517925
 Option 3 ID : 264330517923
 Option 4 ID : 264330517924

Status : Answered

Chosen Option : 4

Q.20 Six students are sitting around a circular table facing the centre. A is an immediate neighbour of both E and D. E sits third to the right of C. D sits third to the left of F. E is an immediate neighbour of F. B sits second to the left of E. Who sits to the immediate left of C?

Ans 1. B

2. D

3. E

4. A

Question ID : 26433068167

Option 1 ID : 264330267181

Option 2 ID : 264330267182

Option 3 ID : 264330267183

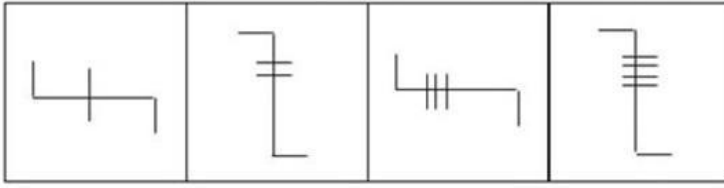
Option 4 ID : 264330267180

Status : Answered

Chosen Option : 2

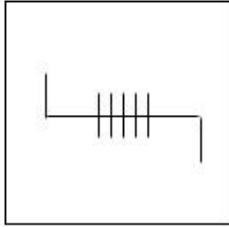


Q.21 Which of the given figures when placed in the 5th position would continue the series that is established by the first four figures?

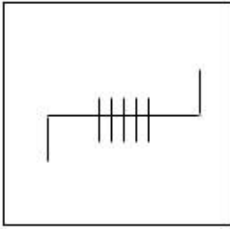


Ans

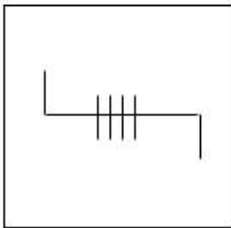
✓ 1.



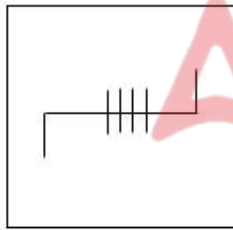
✗ 2.



✗ 3.



✗ 4.



Question ID : 26433087303

Option 1 ID : 264330342851

Option 2 ID : 264330342850

Option 3 ID : 264330342849

Option 4 ID : 264330342852

Status : Answered

Chosen Option : 1

Q.22 Given below are two statements and two conclusions. Take the statements to be true even if they are at variance with commonly known facts, and decide whether the conclusion(s) follow(s) the given statements.

Statements:

All dogs are cats.

Some cats are not dolls.

Conclusions:

I. All dolls are cats.

II. Some cats are dogs.

- Ans 1. Only conclusion II follows
 2. Only conclusion I follows
 3. Both the conclusions follow
 4. Neither conclusion I nor II follows

Question ID : 26433056638

Option 1 ID : 264330221537

Option 2 ID : 264330221536

Option 3 ID : 264330221538

Option 4 ID : 264330221539

Status : Answered

Chosen Option : 1

Q.23 If A denotes '+', B denotes '×', C denotes '-', and D denotes '÷', then what will be the value of the following equation?
 $80 C 16 B 4 A 96 D 4 = ?$

- Ans 1. 37
 2. 54
 3. 120
 4. 40

Question ID : 264330129788

Option 1 ID : 264330508383

Option 2 ID : 264330508384

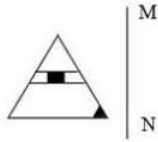
Option 3 ID : 264330508385

Option 4 ID : 264330508386

Status : Answered

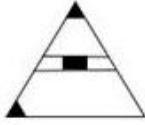
Chosen Option : 4

Q.24 Select the correct mirror image of the given figure when the mirror is placed at line MN as shown.

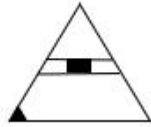


Ans

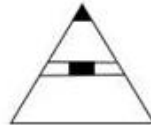
✗ 1.



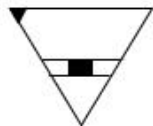
✓ 2.



✗ 3.



✗ 4.



Question ID : 26433056620
Option 1 ID : 264330221465
Option 2 ID : 264330221467
Option 3 ID : 264330221464
Option 4 ID : 264330221466

Status : Answered

Chosen Option : 2

Q.25 If '+' means '÷', '-' means '×', '×' means '-', and '÷' means '+', then what will be the value of the following expression?
 $108 \times 343 + 7 - 2 \div 13 = ?$

Ans ✓ 1. 23

✗ 2. 19

✗ 3. 28

✗ 4. 44

Question ID : 264330101247
Option 1 ID : 264330397535
Option 2 ID : 264330397533
Option 3 ID : 264330397534
Option 4 ID : 264330397536

Status : Answered

Chosen Option : 1

Q.26 Four letter-clusters have been given, out of which three are alike in some manner and one is different. Select the odd letter-cluster.

- Ans
- 1. SUPT
 - 2. JLGK
 - 3. EHBG
 - 4. PRMQ

Question ID : 264330180756
 Option 1 ID : 264330708991
 Option 2 ID : 264330708994
 Option 3 ID : 264330708992
 Option 4 ID : 264330708993
 Status : Answered
 Chosen Option : 3

Q.27 'C @ D' means 'C is the mother of D'.
 'C \$ D' means 'C is the brother of D'.
 'C # D' means 'C is the sister of D'.
 'C * D' means 'C is the father of D'.
 If V \$ Y @ G * F, then how is Y related to F?

- Ans
- 1. Father's mother
 - 2. Sister
 - 3. Father's sister
 - 4. Brother

Question ID : 264330145389
 Option 1 ID : 264330569813
 Option 2 ID : 264330569811
 Option 3 ID : 264330569812
 Option 4 ID : 264330569814
 Status : Answered
 Chosen Option : 1

Q.28 Select the option that is related to the third word in the same way as the second word is related to the first word.
 (The words must be considered as meaningful words and must not be related to each other based on the number of letters/number of consonants/vowels in the word.)
 Cat : Paw :: Crow : ?

- Ans
- 1. Hoff
 - 2. Wings
 - 3. Beak
 - 4. Claw

Question ID : 26433087293
 Option 1 ID : 264330342812
 Option 2 ID : 264330342809
 Option 3 ID : 264330342810
 Option 4 ID : 264330342811
 Status : Not Attempted and Marked For Review
 Chosen Option : --

Q.29 Which of the following numbers will replace the question mark (?) in the given series?
13, 14, -2, 79, -177 ?

- Ans 1. 424
 2. 528
 3. 608
 4. 448

Question ID : 26433069197
Option 1 ID : 264330271302
Option 2 ID : 264330271301
Option 3 ID : 264330271300
Option 4 ID : 264330271303
Status : Not Attempted and
Marked For Review
Chosen Option : --

Q.30 In a certain code language, 'How are you' is coded as 'si de tu' and 'You are fine' is coded as 'de mu si'. What is the code for the word 'How'?

- Ans 1. mu
 2. tu
 3. de
 4. si

Question ID : 26433074767
Option 1 ID : 264330293159
Option 2 ID : 264330293158
Option 3 ID : 264330293157
Option 4 ID : 264330293156
Status : Answered
Chosen Option : 2

Q.31 Manoj starts from point A and drives X km towards the south and then turns left and drives Y km. He then takes a right turn and drives for 4 km to reach point D. If Manoj drove a total of 17 km between Points A and D, and both X and Y are perfect squares where $X > Y$, then what is the value of X ?

- Ans 1. 4
 2. 11
 3. 5
 4. 9

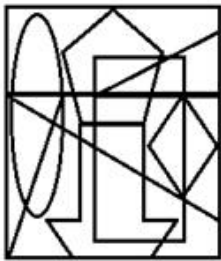
Question ID : 26433097237
Option 1 ID : 264330381648
Option 2 ID : 264330381647
Option 3 ID : 264330381646
Option 4 ID : 264330381645
Status : Answered
Chosen Option : 4

Q.32 If '+' means '-', '-' means 'x', 'x' means '+' and '+' means '+', what will come in place of '?' in the following equation?
 $42 \times 7 - 11 \div 57 + 10 = ?$

- Ans
- 1. 133
 - 2. 113
 - 3. 103
 - 4. 123

Question ID : 264330101150
 Option 1 ID : 264330397147
 Option 2 ID : 264330397146
 Option 3 ID : 264330397148
 Option 4 ID : 264330397145
 Status : Answered
 Chosen Option : 2

Q.33 Select the option figure which is embedded in the given figure as its part (rotation is NOT allowed).



- Ans
- 1.
 - 2.
 - 3.
 - 4.



Question ID : 264330145461
 Option 1 ID : 264330570102
 Option 2 ID : 264330570100
 Option 3 ID : 264330570101
 Option 4 ID : 264330570099
 Status : Answered
 Chosen Option : 2

Q.34 Which of the following terms will replace the question mark (?) in the given series?

PMRO NKTQ LIVS ? HEZW

- Ans
- 1. JGUX
 - 2. GJXU
 - 3. JGVU
 - 4. JGXU

Question ID : 26433085318

Option 1 ID : 264330334973

Option 2 ID : 264330334976

Option 3 ID : 264330334974

Option 4 ID : 264330334975

Status : Answered

Chosen Option : 4

Q.35 Which of the following numbers will replace the question mark (?) in the given series?

93, ?, 102, 111, 123, 138

- Ans
- 1. 95
 - 2. 96
 - 3. 98
 - 4. 97

Question ID : 26433091013

Option 1 ID : 264330357462

Option 2 ID : 264330357464

Option 3 ID : 264330357463

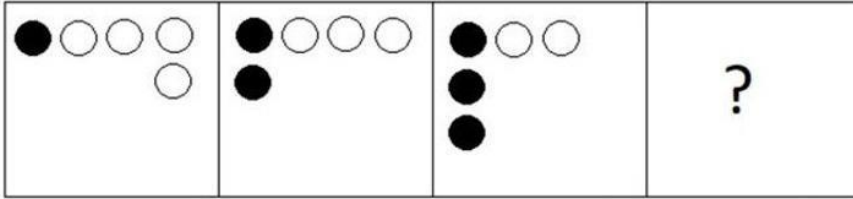
Option 4 ID : 264330357461

Status : Answered


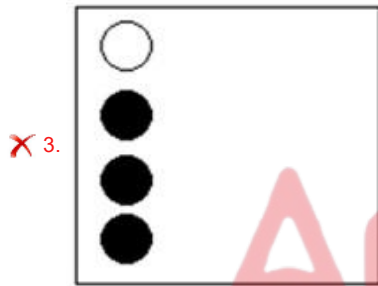
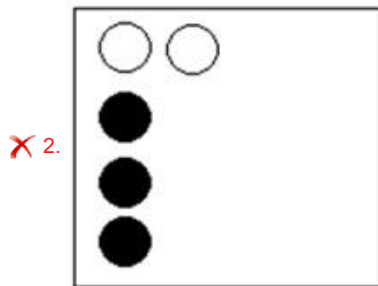
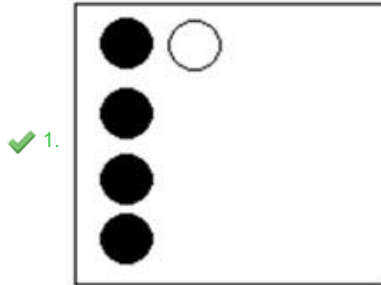
Chosen Option : 2



Q.36 Select the figure that will come next in the following figure series.



Ans



Question ID : 26433087074

Option 1 ID : 264330341938

Option 2 ID : 264330341937

Option 3 ID : 264330341940

Option 4 ID : 264330341939

Status : Answered

Chosen Option : 1

Q.37 Select the option that represents the correct order of the given words as they would appear in an English dictionary?

1. Jalopy
2. Jabber
3. Jackpot
4. Jackdaw
5. Jackal

Ans 1. 2, 5, 4, 3, 1

2. 4, 5, 2, 3, 1

3. 3, 2, 4, 5, 1

4. 2, 4, 3, 1, 5

Question ID : 26433067240

Option 1 ID : 264330263472

Option 2 ID : 264330263475

Option 3 ID : 264330263474

Option 4 ID : 264330263473

Status : Answered

Chosen Option : 1

Q.38 A boy walks 15 m north, turns right and walks 20 m. Again, he turns right and walks 15 m. Finally, he turns to his left and moves 20 m. What is the distance now from his original position?

Ans 1. 40 m

2. 46 m

3. 50 m

4. 45 m

Question ID : 26433082762

Option 1 ID : 264330324881

Option 2 ID : 264330324883

Option 3 ID : 264330324884

Option 4 ID : 264330324882

Status : Answered

Chosen Option : 1

Q.39 Which of the following numbers will replace the question mark (?) in the given series?
38, 64, 98, 140, ?

Ans 1. 190

2. 186

3. 188

4. 192

Question ID : 26433057329

Option 1 ID : 264330224301

Option 2 ID : 264330224303

Option 3 ID : 264330224300

Option 4 ID : 264330224302

Status : Answered

Chosen Option : 1

Q.40 Six students Prateek, Sameer, Kabir, Ziya, Joseph, Kiran are sitting around a circular table facing the centre (not necessarily in the same order). Prateek is an immediate neighbour of both Sameer and Kabir. Ziya is sitting second to the right of Sameer. Kiran is sitting third to the left of Kabir. Joseph is an immediate neighbour of both Ziya and Kabir.
Who is sitting to the immediate left of Joseph?

- Ans
- 1. Kabir
 - 2. Ziya
 - 3. Sameer
 - 4. Kiran

Question ID : 26433082276
 Option 1 ID : 264330322938
 Option 2 ID : 264330322937
 Option 3 ID : 264330322940
 Option 4 ID : 264330322939
 Status : Answered
 Chosen Option : 2

Q.41 Select the set in which the numbers are related in the same way as are the numbers of the following sets.

(NOTE : Operations should be performed on the whole numbers, without breaking down the numbers into its constituent digits. E.g. 13 – Operations on 13 such as adding /subtracting /multiplying etc. to 13 can be performed. Breaking down 13 into 1 and 3 and then performing mathematical operations on 1 and 3 is NOT allowed)

(125, 87, 49), (236, 198, 160)

- Ans
- 1. (194, 162, 124)
 - 2. (222, 186, 140)
 - 3. (166, 128, 101)
 - 4. (277, 239, 201)

Question ID : 264330145302
 Option 1 ID : 264330569464
 Option 2 ID : 264330569465
 Option 3 ID : 264330569463
 Option 4 ID : 264330569466
 Status : Answered
 Chosen Option : 4

Q.42 Which two mathematical signs should be interchanged to make the given equation correct?

$$(63 \times 21) + 8 + 99 \times 11 \div 16 + (12 \times 4) = 158$$

- Ans
- 1. + and –
 - 2. × and +
 - 3. × and –
 - 4. ÷ and ×

Question ID : 264330145308
 Option 1 ID : 264330569489
 Option 2 ID : 264330569488
 Option 3 ID : 264330569490
 Option 4 ID : 264330569487
 Status : Answered
 Chosen Option : 4

Q.43 Select the option in which the given figure is embedded (rotation is NOT allowed).



Ans

- 1.
- 2.
- 3.
- 4.

Question ID : 264330126083

Option 1 ID : 264330494004

Option 2 ID : 264330494007

Option 3 ID : 264330494005

Option 4 ID : 264330494006

Status : Answered

Chosen Option : 4

Q.44 Two statements are given followed by two conclusions numbered I and II. Assuming the statements to be true, even if they seem to be at variance with commonly known facts, decide which of the conclusions logically follow(s) from the statements.

Statements:

All goods are services.

No service is a delivery.

Conclusions:

I. No good is a delivery.

II. Some goods are deliveries.

- Ans
- 1. Neither conclusion I nor II follows
 - 2. Both conclusions I and II follow
 - 3. Only conclusion II follows
 - 4. Only conclusion I follows

Question ID : 26433058041

Option 1 ID : 264330227151

Option 2 ID : 264330227150

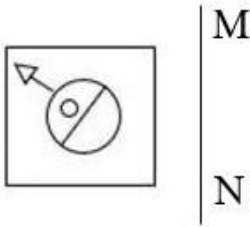
Option 3 ID : 264330227149

Option 4 ID : 264330227148

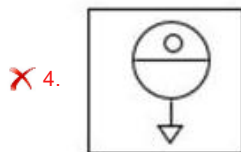
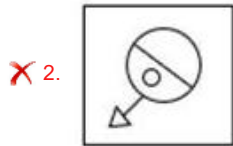
Status : Answered

Chosen Option : 4

Q.45 Select the correct mirror image of the given figure when the mirror is placed at line MN as shown.



Ans



Question ID : 26433056626
 Option 1 ID : 264330221488
 Option 2 ID : 264330221489
 Option 3 ID : 264330221491
 Option 4 ID : 264330221490
 Status : Answered
 Chosen Option : 3

Q.46 Which of the following numbers will replace the question mark (?) in the given series?
 1024, 256, 64, ?, 4

- Ans
- ✗ 1. 32
 - ✗ 2. 34
 - ✗ 3. 36
 - ✓ 4. 16

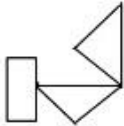
Question ID : 26433092492
 Option 1 ID : 264330363257
 Option 2 ID : 264330363258
 Option 3 ID : 264330363259
 Option 4 ID : 264330363260
 Status : Answered
 Chosen Option : 4

Q.47 Select the option that is related to the fourth term in the same way as the first term is related to the second term and the fifth term is related to the sixth term.
 $5 : 21 :: ? : 252 :: 27 : 725$

- Ans
- 1. 26
 - 2. 10
 - 3. 16
 - 4. 12

Question ID : 26433079356
 Option 1 ID : 264330311414
 Option 2 ID : 264330311412
 Option 3 ID : 264330311413
 Option 4 ID : 264330311415
 Status : Answered
 Chosen Option : 3

Q.48 Select the option in which the given figure is embedded (rotation is NOT allowed).



Ans

- 1.
- 2.
- 3.
- 4.



Question ID : 264330126082
 Option 1 ID : 264330494003
 Option 2 ID : 264330494002
 Option 3 ID : 264330494001
 Option 4 ID : 264330494000
 Status : Answered
 Chosen Option : 2

Q.49 Select the set in which the numbers are related in the same way as are the numbers of the following set.

(NOTE : Operations should be performed on the whole numbers, without breaking down the numbers into its constituent digits. E.g. 13 – Operations on 13 such as adding /subtracting /multiplying etc. to 13 can be performed. Breaking down 13 into 1 and 3 and then performing mathematical operations on 1 and 3 is NOT allowed)

(5, 4, 405)

(7, 3, 500)

- Ans 1. (4, 1, 125)
 2. (3, 2, 145)
 3. (4, 5, 850)
 4. (5, 8, 789)

Question ID : 264330145318

Option 1 ID : 264330569530

Option 2 ID : 264330569528

Option 3 ID : 264330569529

Option 4 ID : 264330569527

Status : Not Attempted and
Marked For Review

Chosen Option : --

Q.50 Select the option that is related to the fifth letter-cluster in the same way as the second letter-cluster is related to the first letter-cluster and the fourth letter-cluster is related to the third letter-cluster.

CREATION : ETGCVKQP :: UNIVERSE : WPKXGTUG :: PLANET : ?

- Ans 1. RNCPGV
 2. RCPNGV
 3. RPGVNC
 4. RPCGVN

Question ID : 264330145396

Option 1 ID : 264330569840

Option 2 ID : 264330569839

Option 3 ID : 264330569841

Option 4 ID : 264330569842

Status : Answered

Chosen Option : 1

Section : General Knowledge and General Awareness

Q.1 Identify the dam that is located in South India.

- Ans 1. Rihand dam
 2. Mettur dam
 3. Gandhi Sagar dam
 4. Tilaiya dam

Question ID : 264330113264

Option 1 ID : 264330445142

Option 2 ID : 264330445141

Option 3 ID : 264330445144

Option 4 ID : 264330445143

Status : Not Attempted and
Marked For Review

Chosen Option : --

Q.2 Who is the author of the novel 'Before We Visit the Goddess'?

Ans ✓ 1. Chitra Banerjee Divakaruni

✗ 2. Kiran Doshi

✗ 3. Arundhati Roy

✗ 4. Jhumpa Lahiri

Question ID : 264330145173

Option 1 ID : 264330568949

Option 2 ID : 264330568947

Option 3 ID : 264330568950

Option 4 ID : 264330568948

Status : Not Attempted and
Marked For Review

Chosen Option : --

Q.3 When the President of India keeps a bill (except money bill and constitutional amendment bill) pending for an indefinite period, it is called _____.

Ans ✓ 1. pocket veto of the President

✗ 2. suspensive veto of the President

✗ 3. absolute veto of the President

✗ 4. amendatory veto of the President

Question ID : 264330113415

Option 1 ID : 264330445745

Option 2 ID : 264330445746

Option 3 ID : 264330445747

Option 4 ID : 264330445748

Status : Not Attempted and
Marked For Review

Chosen Option : --

Q.4 Which of the following union territories has the lowest literacy rate according to the 2011 census?

Ans ✗ 1. Delhi

✓ 2. Dadra and Nagar Haveli

✗ 3. Lakshadweep

✗ 4. Daman and Diu

Question ID : 264330109509

Option 1 ID : 264330430315

Option 2 ID : 264330430314

Option 3 ID : 264330430313

Option 4 ID : 264330430316

Status : Answered

Chosen Option : 3

Q.5 Where are Huka Falls located?

- Ans 1. Spain
 2. Australia
 3. New Zealand
 4. Germany

Question ID : 26433064473
Option 1 ID : 264330252487
Option 2 ID : 264330252484
Option 3 ID : 264330252485
Option 4 ID : 264330252486
Status : Not Attempted and
Marked For Review
Chosen Option : --

Q.6 A money bill under Article 111 of the Constitution of India, presented to the President for assent, has to be endorsed by a Certificate of the _____ signed by him/her that it is a money bill.

- Ans 1. Speaker of the Lok Sabha
 2. Secretary General of the Rajya Sabha
 3. Deputy Chairman of the Rajya Sabha
 4. Secretary General of the Lok Sabha

Question ID : 264330145266
Option 1 ID : 264330569322
Option 2 ID : 264330569320
Option 3 ID : 264330569321
Option 4 ID : 264330569319
Status : Answered
Chosen Option : 1

Q.7 Which state was the host of fifth Khelo India Youth Games 2022?

- Ans 1. Madhya Pradesh
 2. Uttarakhand
 3. Haryana
 4. Jharkhand

Question ID : 264330119246
Option 1 ID : 264330467273
Option 2 ID : 264330467272
Option 3 ID : 264330467274
Option 4 ID : 264330467271
Status : Answered
Chosen Option : 2

Q.8 Who among the following is considered as the 'Father of Carnatic Music in India'?

- Ans
- 1. Gopala
 - 2. Purandardas
 - 3. Narayan Tirtha
 - 4. Krishna Bharati

Question ID : 26433074823
Option 1 ID : 264330293381
Option 2 ID : 264330293380
Option 3 ID : 264330293383
Option 4 ID : 264330293382
Status : Not Attempted and
Marked For Review
Chosen Option : --

Q.9 Terrestrial planets are composed of _____ .

- Ans
- 1. metals and air
 - 2. metals and gas
 - 3. rocks and gas
 - 4. rocks and metals

Question ID : 264330113352
Option 1 ID : 264330445495
Option 2 ID : 264330445493
Option 3 ID : 264330445494
Option 4 ID : 264330445496
Status : Not Attempted and
Marked For Review
Chosen Option : --

Q.10 Which of the following is considered a capital expense?

- Ans
- 1. Payment of salaries
 - 2. Pension
 - 3. Construction of school buildings
 - 4. Subsidies

Question ID : 264330145243
Option 1 ID : 264330569229
Option 2 ID : 264330569230
Option 3 ID : 264330569227
Option 4 ID : 264330569228
Status : Not Attempted and
Marked For Review
Chosen Option : --

Q.11 Which Goddess is associated with the Gangaur Festival celebrated in Central and Western India?

- Ans
- 1. Goddess Saraswati
 - 2. Goddess Lakshmi
 - 3. Goddess Parvati
 - 4. Goddess Kali

Question ID : 264330145142
Option 1 ID : 264330568826
Option 2 ID : 264330568823
Option 3 ID : 264330568825
Option 4 ID : 264330568824
Status : Answered
Chosen Option : 3

Q.12 In which of the following Indian states does the southwest monsoon set first to give rainfall?

- Ans
- 1. Goa
 - 2. Andhra Pradesh
 - 3. Kerala
 - 4. Tamil Nadu

Question ID : 264330119787
Option 1 ID : 264330469426
Option 2 ID : 264330469423
Option 3 ID : 264330469425
Option 4 ID : 264330469424
Status : Answered
Chosen Option : 3

Q.13 In which year did the 44th Amendment remove the right to property from the list of fundamental rights?

- Ans
- 1. 1975
 - 2. 1978
 - 3. 1981
 - 4. 1973

Question ID : 264330116398
Option 1 ID : 264330457678
Option 2 ID : 264330457679
Option 3 ID : 264330457680
Option 4 ID : 264330457677
Status : Answered
Chosen Option : 4

Q.14 In which year was the Small Industries Development Bank of India (SIDBI) set up?

- Ans
- 1. 1990
 - 2. 1988
 - 3. 1989
 - 4. 1987

Question ID : 264330145247
Option 1 ID : 264330569246
Option 2 ID : 264330569244
Option 3 ID : 264330569245
Option 4 ID : 264330569243
Status : Not Answered
Chosen Option : --

Q.15 Which Nobel Laureate conducted an experiment in the late 19th century and observed that a glass tube filled with a low-pressure gas emitted radiation when a voltage was applied between two metal plates?

- Ans
- 1. Victor Francis Hess
 - 2. Philipp Lenard
 - 3. Paul Dirac
 - 4. Hideki Yukawa

Question ID : 264330141665
Option 1 ID : 264330554979
Option 2 ID : 264330554982
Option 3 ID : 264330554980
Option 4 ID : 264330554981
Status : Not Answered
Chosen Option : --

Q.16 Which of the following Articles of the Indian Constitution mentions that all executive actions of the Government of India shall be expressed to be taken in the name of the President?

- Ans
- 1. Article 81
 - 2. Article 67
 - 3. Article 77
 - 4. Article 48

Question ID : 264330139436
Option 1 ID : 264330546177
Option 2 ID : 264330546176
Option 3 ID : 264330546178
Option 4 ID : 264330546175
Status : Answered
Chosen Option : 2

Q.17 Identify the third germinal layer found in triploblastic animals.

- Ans
- 1. Mesoderm
 - 2. Ectoderm
 - 3. Coelom
 - 4. Endoderm

Question ID : 264330145217
Option 1 ID : 264330569126
Option 2 ID : 264330569123
Option 3 ID : 264330569125
Option 4 ID : 264330569124
Status : Not Attempted and Marked For Review
Chosen Option : --

Q.18 What is the metric unit of pressure that is equal to 0.986923 atm?

- Ans 1. Bar
 2. Quart
 3. Gallon
 4. Yard

Question ID : 264330110059

Option 1 ID : 264330432516

Option 2 ID : 264330432513

Option 3 ID : 264330432515

Option 4 ID : 264330432514

Status : Not Attempted and
Marked For Review

Chosen Option : --

Q.19 Famous musician Talvin Singh is associated with playing the _____.

- Ans 1. shehnai
 2. flute
 3. veena
 4. tabla

Question ID : 264330145187

Option 1 ID : 264330569006

Option 2 ID : 264330569005

Option 3 ID : 264330569003

Option 4 ID : 264330569004

Status : Answered

Chosen Option : 3

Q.20 During the year 1991–92, the industrial production recorded a _____ growth of _____.

- Ans 1. negative; 1.1 Percent
 2. positive; 0.6 Percent
 3. positive; 1.1 Percent
 4. negative; 0.9 Percent

Question ID : 264330114279

Option 1 ID : 264330449203

Option 2 ID : 264330449202

Option 3 ID : 264330449204

Option 4 ID : 264330449201

Status : Not Attempted and
Marked For Review

Chosen Option : --

Q.21 Select the correct pair of classical dance and dancer.

- Ans 1. Padma Subrahmanyam – Bharatnatyam
 2. Mallika Sarabhai – Kathak
 3. Jhelum Paranjape – Kuchipudi
 4. K Uma Rama Rao – Odissi

Question ID : 264330141777

Option 1 ID : 264330555428

Option 2 ID : 264330555427

Option 3 ID : 264330555429

Option 4 ID : 264330555430

Status : Answered

Chosen Option : 1

Q.22 In which type of tax is the marginal tax rate higher than the average tax rate?

- Ans
- 1. Digressive
 - 2. Proportional
 - 3. Regressive
 - 4. Progressive

Question ID : 264330141432

Option 1 ID : 264330554065

Option 2 ID : 264330554063

Option 3 ID : 264330554066

Option 4 ID : 264330554064

Status : **Not Attempted and
Marked For Review**

Chosen Option : --

Q.23 Which of the following Governor Generals, under the British rule in India, professionalised, bureaucratized and Europeanised the administration of East India Company?

- Ans
- 1. Lord Canning
 - 2. Lord Cornwallis
 - 3. Warren Hastings
 - 4. Lord Dalhousie

Question ID : 264330165381

Option 1 ID : 264330648605

Option 2 ID : 264330648606

Option 3 ID : 264330648604

Option 4 ID : 264330648603

Status : **Not Attempted and
Marked For Review**

Chosen Option : --

Q.24 Which of the following elements is a member of the actinoid series?

- Ans
- 1. Magnesium
 - 2. Lanthanum
 - 3. Lutetium
 - 4. Thorium

Question ID : 264330131695

Option 1 ID : 264330515881

Option 2 ID : 264330515879

Option 3 ID : 264330515880

Option 4 ID : 264330515882

Status : **Not Attempted and
Marked For Review**

Chosen Option : --

Q.25 'The Great Indian Novel' is written by _____ in which he based 'The Mahabharata' as a framework for his satirical novel.

- Ans 1. Shashi Tharoor
 2. Khushwant Singh
 3. Sarojini Naidu
 4. Kuldip Nayyar

Question ID : 26433071685
Option 1 ID : 264330281167
Option 2 ID : 264330281166
Option 3 ID : 264330281165
Option 4 ID : 264330281164
Status : Answered
Chosen Option : 1

Q.26 Alarjel Valli is an Indian classical dancer and choreographer and a foremost exponent of the _____ dance form of Bharatanatyam.

- Ans 1. Tarangam style
 2. Pandanallur style
 3. Vazhuvoor style
 4. Melattur style

Question ID : 264330145149
Option 1 ID : 264330568854
Option 2 ID : 264330568851
Option 3 ID : 264330568852
Option 4 ID : 264330568853
Status : Not Attempted and Marked For Review
Chosen Option : --

Q.27 In which of the following processes nutrients or contaminants are carried away by water or moved into the lower layer of the soil?

- Ans 1. Ploughing
 2. Leaching
 3. Sowing
 4. Bleaching

Question ID : 264330163195
Option 1 ID : 264330640094
Option 2 ID : 264330640093
Option 3 ID : 264330640092
Option 4 ID : 264330640091
Status : Not Attempted and Marked For Review
Chosen Option : --

Q.28 In July 2018, an experiment aboard the International Space Station cooled a cloud of atoms of which chemical element to one ten-millionth of one Kelvin above absolute zero, forming a Bose-Einstein Condensate in space?

- Ans 1. Rubidium
 2. Plutonium
 3. Radium
 4. Thorium

Question ID : 264330110065
Option 1 ID : 264330432539
Option 2 ID : 264330432538
Option 3 ID : 264330432537
Option 4 ID : 264330432540

Status : Not Attempted and
Marked For Review

Chosen Option : --

Q.29 Malvikagnimitra, a drama of the 5th century CE, was written by _____.

- Ans 1. Pingala
 2. Kalidasa
 3. Harisena
 4. Bhavabhuti

Question ID : 264330165577
Option 1 ID : 264330649388
Option 2 ID : 264330649387
Option 3 ID : 264330649389
Option 4 ID : 264330649390

Status : Not Attempted and
Marked For Review

Chosen Option : --

Q.30 Who was the first winner of the Arjuna Award in Kabaddi?

- Ans 1. Sahanand Mahadev Shetty
 2. Manjeet Chhillar
 3. BC Ramesh
 4. Bholanath Guin

Question ID : 26433092338
Option 1 ID : 264330362649
Option 2 ID : 264330362652
Option 3 ID : 264330362650
Option 4 ID : 264330362651

Status : Not Attempted and
Marked For Review

Chosen Option : --

Q.31 The number of Pawn in chess is_____.

Ans 1. 16

2. 14

3. 17

4. 15

Question ID : 264330109730

Option 1 ID : 264330431199

Option 2 ID : 264330431197

Option 3 ID : 264330431200

Option 4 ID : 264330431198

Status : Answered

Chosen Option : 1

Q.32 Who made the use of Gun powder common in North India to defeat enemies?

Ans 1. Ibrahim Lodi

2. Babur

3. Daulat Khan Lodi

4. Rana Sanga

Question ID : 264330109023

Option 1 ID : 264330428370

Option 2 ID : 264330428371

Option 3 ID : 264330428372

Option 4 ID : 264330428369

Status : Answered

Chosen Option : 2

Q.33 By which Indian Constitutional Amendment Act was the 11th fundamental duty added in the Indian Constitution?

Ans 1. 87th Constitutional Amendment Act

2. 88th Constitutional Amendment Act

3. 85th Constitutional Amendment Act

4. 86th Constitutional Amendment Act

Question ID : 264330111513

Option 1 ID : 264330438139

Option 2 ID : 264330438140

Option 3 ID : 264330438137

Option 4 ID : 264330438138

Status : Answered

Chosen Option : 1

Q.34 Which of the following Acts prevents disrespect to the National Flag and National Anthem?

Ans 1. Protection of National Honour Act, 1996

2. Civil Liberties Act, 2001

3. Unlawful Activities (Prevention) Act, 2006

4. Prevention of Insults to National Honour Act, 1971

Question ID : 264330114751

Option 1 ID : 264330451089

Option 2 ID : 264330451091

Option 3 ID : 264330451092

Option 4 ID : 264330451090

Status : Not Attempted and
Marked For Review

Chosen Option : --

Q.35 In alchemy, aqua fortis is the classical name of which chemical compound that is used chiefly in the manufacture of explosives and fertilisers, and in organic synthesis?

- Ans
- 1. Nitric acid
 - 2. Formic acid
 - 3. Chloric acid
 - 4. Hydrobromic acid

Question ID : 26433055081

Option 1 ID : 264330215310

Option 2 ID : 264330215308

Option 3 ID : 264330215309

Option 4 ID : 264330215311

Status : Not Attempted and
Marked For Review

Chosen Option : --

Q.36 What is the height of the badminton net?

- Ans
- 1. 6 feet
 - 2. 6.5 feet
 - 3. 5.1 feet
 - 4. 5.5 feet

Question ID : 26433071382

Option 1 ID : 264330279953

Option 2 ID : 264330279954

Option 3 ID : 264330279952

Option 4 ID : 264330279955

Status : Answered

Chosen Option : 2

Q.37 Which of the following mosques/masjids was built during the reign of Lodi dynasty of the Delhi Sultanate?

- Ans
- 1. Begumpuri mosque, Delhi
 - 2. Lal Masjid, Delhi
 - 3. Moth ki Masjid, Delhi
 - 4. Quwwat al-Islam, Delhi

Question ID : 264330106563

Option 1 ID : 264330418554

Option 2 ID : 264330418556

Option 3 ID : 264330418555

Option 4 ID : 264330418553

Status : Answered

Chosen Option : 3

Q.38 Sattriya was recognised in _____ as a Classical Dance by Sangeet Natak Akademi.

Ans 1. 2000

2. 2010

3. 2020

4. 2005

Question ID : 26433054502

Option 1 ID : 264330212992

Option 2 ID : 264330212994

Option 3 ID : 264330212995

Option 4 ID : 264330212993

Status : Not Attempted and
Marked For Review

Chosen Option : --

Q.39 The synthesis of which chemical is inhibited due to aspirin?

Ans 1. Pyrites

2. Prostaglandins

3. Histamines

4. Analgesics

Question ID : 264330145207

Option 1 ID : 264330569086

Option 2 ID : 264330569083

Option 3 ID : 264330569084

Option 4 ID : 264330569085

Status : Not Attempted and
Marked For Review

Chosen Option : --

Q.40 Who was the first ecologist to describe the specific shape of eco-trophic interactions, which he called the pyramid of numbers, in the 1920s?

Ans 1. Charles Elton

2. Ernst Haeckel

3. Howard Thomas Odum

4. Edward O Wilson

Question ID : 264330145193

Option 1 ID : 264330569029

Option 2 ID : 264330569030

Option 3 ID : 264330569028

Option 4 ID : 264330569027

Status : Not Attempted and
Marked For Review

Chosen Option : --

Q.41 Siddheshvara Mahadeva temple in Bengal depicts the architecture of which dynasty?

- Ans
- 1. Chalukaya dynasty
 - 2. Shung dynasty
 - 3. Hussain Shahi dynasty
 - 4. Pala dynasty

Question ID : 264330164856

Option 1 ID : 264330646554

Option 2 ID : 264330646553

Option 3 ID : 264330646552

Option 4 ID : 264330646551

Status : **Not Attempted and
Marked For Review**

Chosen Option : --

Q.42 In 2010, considering its outstanding value and vulnerability, UNESCO recognised 'Mudiyettu', an age-old ritual-drama of _____, as an 'intangible cultural heritage of humanity'.

- Ans
- 1. Tamil Nadu
 - 2. Karnataka
 - 3. Kerala
 - 4. Telangana

Question ID : 26433054505

Option 1 ID : 264330213004

Option 2 ID : 264330213005

Option 3 ID : 264330213006

Option 4 ID : 264330213007

Status : **Not Attempted and
Marked For Review**

Chosen Option : --

Q.43 Choose the INCORRECT statement related to monsoon.

- Ans
- 1. The Southwest Monsoon winds blow over the warm oceans, gather moisture and bring widespread rainfall over the mainland of India.
 - 2. The intensity and position of the high-pressure area, east of Madagascar, affects the Indian Monsoon.
 - 3. The difference in pressure over Tahiti (Pacific Ocean), and Darwin in northern Australia (Indian Ocean) is computed to predict the intensity of the monsoons.
 - 4. The western cyclonic disturbances occur due to withdrawal or the retreat of the monsoon.

Question ID : 264330169316

Option 1 ID : 264330664043

Option 2 ID : 264330664045

Option 3 ID : 264330664044

Option 4 ID : 264330664046

Status : **Not Attempted and
Marked For Review**

Chosen Option : --

Q.44 The natural vegetation of India is broadly divided into _____ groups.

Ans 1. 6

2. 5

3. 9

4. 7

Question ID : 264330163241

Option 1 ID : 264330640277

Option 2 ID : 264330640278

Option 3 ID : 264330640275

Option 4 ID : 264330640276

Status : Not Attempted and
Marked For Review

Chosen Option : --

Q.45 According to the Census of India 2011, what was the percentage of Sikh communities in the total population in India?

Ans 1. 0.4%

2. 79.8%

3. 14.2%

4. 1.7%

Question ID : 264330166807

Option 1 ID : 264330654265

Option 2 ID : 264330654264

Option 3 ID : 264330654263

Option 4 ID : 264330654266

Status : Not Attempted and
Marked For Review

Chosen Option : --

Q.46 Which of the following is NOT a food preservative?

Ans 1. Aqua regia

2. Vinegar

3. Sodium chloride

4. Sodium nitrite

Question ID : 26433089678

Option 1 ID : 264330352216

Option 2 ID : 264330352213

Option 3 ID : 264330352215

Option 4 ID : 264330352214

Status : Not Attempted and
Marked For Review

Chosen Option : --

Q.47 Losar (a new year festival) is celebrated in which of the following states?

- Ans 1. Jharkhand
 2. Arunachal Pradesh
 3. Himachal Pradesh
 4. Uttarakhand

Question ID : 264330164808
Option 1 ID : 264330646360
Option 2 ID : 264330646359
Option 3 ID : 264330646362
Option 4 ID : 264330646361
Status : Answered
Chosen Option : 2

Q.48 Who among the following leaders founded the women's wing of Congress in 1940?

- Ans 1. Lakshmi Sahgal
 2. Sarojini Naidu
 3. Sucheta Kriplani
 4. Aruna Asaf Ali

Question ID : 26433099176
Option 1 ID : 264330389318
Option 2 ID : 264330389320
Option 3 ID : 264330389317
Option 4 ID : 264330389319
Status : Not Attempted and
Marked For Review
Chosen Option : --

Q.49 Which of the following schemes adopts the One District One Product (ODOP) approach to reap the benefit of scale in terms of procurement of inputs, availing common services and marketing of products?

- Ans 1. Pradhan Mantri Kisan Sampada Yojana
 2. Micro and Small Enterprises Cluster Development Programme (MSE-CDP)
 3. Production Linked Incentive Scheme For Food Processing Industry (PLISFPI)
 4. Pradhan Mantri Formalisation of Micro Food Processing Enterprises (PMFME)

Question ID : 26433064564
Option 1 ID : 264330252849
Option 2 ID : 264330252851
Option 3 ID : 264330252850
Option 4 ID : 264330252848
Status : Not Attempted and
Marked For Review
Chosen Option : --

Q.50 Which of the following Acts, enacted by the British Parliament, provided for the establishment of a Law Commission for the consolidation and codification of Indian Laws?

- Ans
- 1. Indian Council Act, 1909
 - 2. Government of India Act, 1919
 - 3. Charter Act, 1813
 - 4. Charter Act, 1833

Question ID : 264330112336
Option 1 ID : 264330441432
Option 2 ID : 264330441429
Option 3 ID : 264330441431
Option 4 ID : 264330441430
Status : Not Answered
Chosen Option : --

Section : Quantitative Aptitude

Q.1 What should be the value in place of (?) in $7\frac{5}{8} + \frac{5}{8}$ of $184 \times 15 \div 5 - (?) = 0$.

- Ans
- 1. $-352\frac{5}{8}$
 - 2. $152\frac{1}{8}$
 - 3. $-152\frac{1}{8}$
 - 4. $352\frac{5}{8}$

Question ID : 26433074217
Option 1 ID : 264330290991
Option 2 ID : 264330290990
Option 3 ID : 264330290988
Option 4 ID : 264330290989
Status : Not Attempted and Marked For Review
Chosen Option : --

Q.2 The following table shows the earning of different firms (in ₹ crore) in different years.

Firm \ Year	2012	2013	2014	2015	2016
P	50	45	49	56	57
Q	46	48	50	55	62
R	70	65	63	68	73
S	38	47	56	60	69

The earning (in ₹ crore) of which firm was highest in the year 2015?

- Ans
- 1. P
 - 2. S
 - 3. R
 - 4. Q

Question ID : 264330167426

Option 1 ID : 264330656675

Option 2 ID : 264330656678

Option 3 ID : 264330656677

Option 4 ID : 264330656676

Status : Answered

Chosen Option : 3

Q.3 A shopkeeper allows a discount of 15% on an article and still makes a profit of 20%. What does the shopkeeper pay for an article whose marked price is ₹7,200?

- Ans
- 1. ₹6,120
 - 2. ₹5,120
 - 3. ₹6,100
 - 4. ₹5,100

Question ID : 264330165164

Option 1 ID : 264330647756

Option 2 ID : 264330647757

Option 3 ID : 264330647758

Option 4 ID : 264330647755

Status : Answered

Chosen Option : 2

Q.4

If $\tan A = \frac{2}{5}$ find the value of $\frac{\sec^2 A}{\operatorname{cosec}^2 A}$.

Ans

1. $\frac{2}{5}$
2. $\frac{4}{25}$
3. $\frac{9}{25}$
4. $\frac{3}{5}$

Question ID : 264330145127

Option 1 ID : 264330568763

Option 2 ID : 264330568765

Option 3 ID : 264330568766

Option 4 ID : 264330568764

Status : Answered

Chosen Option : 2

Q.5 What is the compound interest on a sum of ₹25,000 after three years at a rate of 12 percent per annum interest compounded yearly?

Ans

1. ₹9,824.00
2. ₹10,520.00
3. ₹9,956.86
4. ₹10,123.20

Question ID : 264330145044

Option 1 ID : 264330568431

Option 2 ID : 264330568434

Option 3 ID : 264330568432

Option 4 ID : 264330568433

Status : Answered

Chosen Option : 4

Q.6 The least number which should be added to 1351 so that the sum is exactly divisible by 2,4,6 and 8 is:

Ans

1. 11
2. 15
3. 13
4. 17

Question ID : 26433075090

Option 1 ID : 264330294448

Option 2 ID : 264330294450

Option 3 ID : 264330294449

Option 4 ID : 264330294451

Status : Answered

Chosen Option : 4

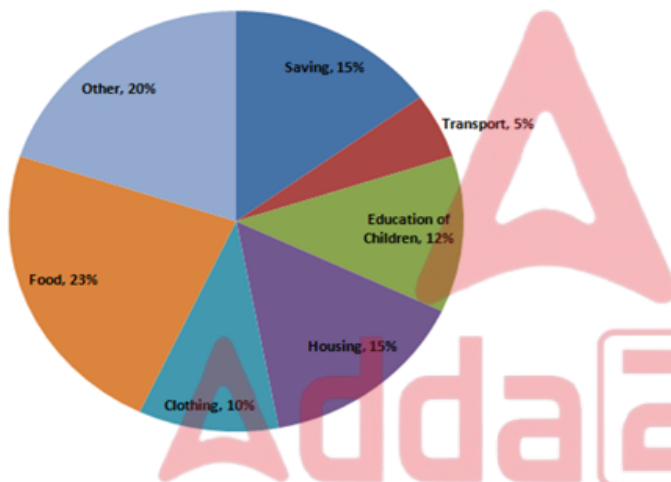
Q.7 In a $\triangle PQR$ and $\triangle ABC$, $\angle P = \angle A$ and $AC = PR$. Which of the following conditions is true for triangle PQR and ABC to be congruent?

- Ans 1. $AB = PQ$ by SSS
 2. $AB = PQ$ by SAS
 3. $BC = QR$ by ASS
 4. $\angle Q = \angle B$ by AAA

Question ID : 264330157068
 Option 1 ID : 264330615644
 Option 2 ID : 264330615645
 Option 3 ID : 264330615643
 Option 4 ID : 264330615646
 Status : Answered
 Chosen Option : 3

Q.8 Study the given pie-chart and answer the question that follows.

The pie-chart shows the expenditure of a family on different items and their savings throughout the year 2021.



If the total income of the family was ₹1,00,000, how much money (in ₹) was spent on the education of the children?

- Ans 1. 12,500
 2. 12,000
 3. 13,500
 4. 13,000

Question ID : 264330163477
 Option 1 ID : 264330641168
 Option 2 ID : 264330641167
 Option 3 ID : 264330641170
 Option 4 ID : 264330641169
 Status : Answered
 Chosen Option : 2

Q.9 A vendor bought a book marked at ₹850 at successive discounts of 20% and 10%, respectively. He spent ₹55 on transport and sold the book for ₹980. What will be his profit percentage (rounded off to 2 decimal places)?

- Ans
- 1. 45.65%
 - 2. 48.25%
 - 3. 50.65%
 - 4. 46.93%

Question ID : 264330158255

Option 1 ID : 264330620379

Option 2 ID : 264330620381

Option 3 ID : 264330620382

Option 4 ID : 264330620380

Status : Not Attempted and
Marked For Review

Chosen Option : --

Q.10 Two numbers are in the ratio of 4 : 3. The product of their HCF and LCM is 2700. The difference between the numbers is:

- Ans
- 1. 15
 - 2. 30
 - 3. 25
 - 4. 105

Question ID : 26433063440

Option 1 ID : 264330248412

Option 2 ID : 264330248414

Option 3 ID : 264330248415

Option 4 ID : 264330248413

Status : Answered

Chosen Option : 1

Q.11 Ramesh borrowed some money at rate of 5% per annum for the first four years, 8% per annum for the next six years, and 12% per annum for the period beyond ten years. If the total interest paid by him at the end of twelve years is ₹9,016, then find the money borrowed by Ramesh.

- Ans
- 1. ₹9,816
 - 2. ₹9,800
 - 3. ₹9,016
 - 4. ₹9,616

Question ID : 264330165525

Option 1 ID : 264330649182

Option 2 ID : 264330649181

Option 3 ID : 264330649179

Option 4 ID : 264330649180

Status : Answered

Chosen Option : 2

Q.12 The area of an equilateral triangle is $4\sqrt{3}$ cm². Find the side (in cm) of the triangle.

- Ans
- 1. 2
 - 2. 4
 - 3. $\sqrt{3}$
 - 4. $2\sqrt{3}$

Question ID : 264330157739

Option 1 ID : 264330618317

Option 2 ID : 264330618318

Option 3 ID : 264330618315

Option 4 ID : 264330618316

Status : Not Attempted and
Marked For Review

Chosen Option : --

Q.13 The following table shows the percentage of students passing out of four colleges (A,B,C and D) over four years. Study the table and answer the question that follows.

Years	College A	College B	College C	College D
2019	68	78	56	78
2020	72	86	78	82
2021	78	91	82	85
2022	80	87	84	87

In which college is the average percentage of passing students over the given four years the least?

- Ans
- 1. College D
 - 2. College C
 - 3. College B
 - 4. College A

Question ID : 264330165159

Option 1 ID : 264330647738

Option 2 ID : 264330647737

Option 3 ID : 264330647736

Option 4 ID : 264330647735

Status : Answered

Chosen Option : 4

Q.14 The average weight of 15 people increases by 3.2 kg when a new person comes in place of one of them weighing 52 kg. The weight of the new person is:

- Ans
- 1. 48 kg
 - 2. 96 kg
 - 3. 100 kg
 - 4. 52 kg

Question ID : 264330165641

Option 1 ID : 264330649643

Option 2 ID : 264330649645

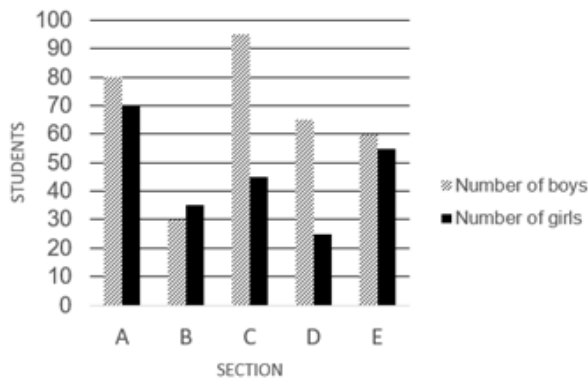
Option 3 ID : 264330649646

Option 4 ID : 264330649644

Status : Not Attempted and
Marked For Review

Chosen Option : --

Q.15 Study the given graph and answer the following question.
Number of boys and girls students in each section.



The number of boy students in section B is approximately what percentage of the number of girl students in section E?

- Ans
- 1. 25%
 - 2. 55%
 - 3. 45%
 - 4. 15%

Question ID : 264330165429

Option 1 ID : 264330648796

Option 2 ID : 264330648798

Option 3 ID : 264330648797

Option 4 ID : 264330648795

Status : Not Attempted and
Marked For Review

Chosen Option : --

Q.16 If $x \left(5 - \frac{2}{x} \right) = \frac{5}{x}$, then the value of $x^2 + \frac{1}{x^2}$ is:

- Ans
- 1. $\frac{54}{25}$
 - 2. $\frac{53}{28}$
 - 3. $\frac{53}{27}$
 - 4. $\frac{54}{23}$

Question ID : 264330157071

Option 1 ID : 264330615657

Option 2 ID : 264330615656

Option 3 ID : 264330615655

Option 4 ID : 264330615658

Status : Answered

Chosen Option : 1

Q.17 The length and the breadth of the floor of a rectangular hall are 126 feet and 90 feet, respectively. What will be the area (in square feet) of each of the largest identical square tiles that can be used to tile this floor in a way that no part of the floor remains uncovered?

- Ans
- 1. 484
 - 2. 256
 - 3. 324
 - 4. 196

Question ID : 264330103226
 Option 1 ID : 264330405211
 Option 2 ID : 264330405210
 Option 3 ID : 264330405212
 Option 4 ID : 264330405209

Status : Not Attempted and Marked For Review

Chosen Option : --

Q.18 Study the given table and answer the question that follows. The table shows the consumption of food grains per day (in grams) in the given set of following years.

Year	Rice	Wheat	Coarse grains	Pulses
1960-62	161	62	131	61
1970-72	197	81	116	64
1980-82	187	116	103	46
1990-92	189	124	101	44
2000-02	201	137	86	64

For which food grain consumption was there successive increase over the given set of years?

- Ans
- 1. Rice
 - 2. Pulses
 - 3. Coarse grains
 - 4. Wheat

Question ID : 264330165467
 Option 1 ID : 264330648947
 Option 2 ID : 264330648950
 Option 3 ID : 264330648949
 Option 4 ID : 264330648948

Status : Answered

Chosen Option : 4

Q.19 The LCM of two prime numbers x and y ($x > y$) is 533. The value of $4y - x$ is:

- Ans
- 1. 18
 - 2. 11
 - 3. 23
 - 4. 21

Question ID : 26433064887
 Option 1 ID : 264330254143
 Option 2 ID : 264330254141
 Option 3 ID : 264330254142
 Option 4 ID : 264330254140

Status : Not Attempted and Marked For Review

Chosen Option : --

Q.20 If $A + B = 90^\circ$, then the expression $\frac{\cot A}{\cot B} + \cos^2 A + \cos^2 B$ is equal to:

- Ans
- 1. $\cot^2 B$
 - 2. $\operatorname{cosec}^2 A$
 - 3. $\cot^2 A$
 - 4. $\operatorname{cosec}^2 B$

Question ID : 264330157076

Option 1 ID : 264330615675

Option 2 ID : 264330615676

Option 3 ID : 264330615677

Option 4 ID : 264330615678

Status : Not Attempted and
Marked For Review

Chosen Option : --

Q.21 Ramesh does half as much work as Parul in $\frac{4}{5}$ of the time. If together Ramesh and Parul take 24 days to complete the work, then how much time will Parul take to do it?

- Ans
- 1. 38 days
 - 2. 41 days
 - 3. 37 days
 - 4. 39 days

Question ID : 264330118430

Option 1 ID : 264330465121

Option 2 ID : 264330465123

Option 3 ID : 264330465124

Option 4 ID : 264330465122

Status : Not Attempted and
Marked For Review

Chosen Option : --

Q.22 Study the given table and answer the question that follows.
The table shows the number of employees in five different organisations A, B, C, D and E in different departments.

Dept ↓ Org →	A	B	C	D	E
HR	1050	1015	976	888	1004
Finance	1017	960	786	1025	963
Marketing	1382	1384	1275	1300	1290
Production	1542	1545	4550	1570	1580
Accounts	786	745	801	800	735
Legal	48	54	36	30	53
Total	5825	5703	5424	5613	5625

Which organisation has minimum number of employees?

- Ans
- ✓ 1. C
 - ✗ 2. B
 - ✗ 3. D
 - ✗ 4. E

Question ID : 264330157720
 Option 1 ID : 264330618240
 Option 2 ID : 264330618239
 Option 3 ID : 264330618241
 Option 4 ID : 264330618242
 Status : Answered
 Chosen Option : 1

Q.23 If $\sin \theta + \cos \theta = \frac{\sqrt{11}}{3}$, then the value of $(\cos \theta - \sin \theta)$ is:

- Ans
- ✗ 1. $\frac{\sqrt{5}}{3}$
 - ✗ 2. $\frac{7}{3}$
 - ✗ 3. $\frac{5}{3}$
 - ✓ 4. $\frac{\sqrt{7}}{3}$

Question ID : 264330158304
 Option 1 ID : 264330620576
 Option 2 ID : 264330620577
 Option 3 ID : 264330620575
 Option 4 ID : 264330620578
 Status : Not Attempted and
 Marked For Review
 Chosen Option : --

Q.24 If $(48 \div 72 \times 3) - [15 \div 8 \times (40 - 32) - 10] + 2P = 6 \div 2$, then find the value of P?

- Ans 1. 3
 2. 4
 3. 2
 4. 1

Question ID : 26433071276
 Option 1 ID : 264330279530
 Option 2 ID : 264330279531
 Option 3 ID : 264330279529
 Option 4 ID : 264330279528
 Status : Answered
 Chosen Option : 1

Q.25 Mayur sold a watch at a profit of 7%. If he had sold it for ₹1,329 more, he would have gained 57%. Find the cost price (in ₹) of the watch.

- Ans 1. 2580
 2. 2658
 3. 2420
 4. 2856

Question ID : 264330102342
 Option 1 ID : 264330401834
 Option 2 ID : 264330401835
 Option 3 ID : 264330401833
 Option 4 ID : 264330401836
 Status : Answered
 Chosen Option : 2

Q.26 If $A + \frac{1}{1 + \frac{1}{2 + \frac{1}{3}}} = \frac{9}{10}$, then the value of A is:

- Ans 1. $\frac{1}{5}$
 2. $\frac{3}{10}$
 3. $\frac{2}{5}$
 4. $\frac{1}{10}$

Question ID : 264330157770
 Option 1 ID : 264330618440
 Option 2 ID : 264330618441
 Option 3 ID : 264330618442
 Option 4 ID : 264330618439
 Status : Answered
 Chosen Option : 1

Q.27 Find the area of a rhombus if the perimeter of the rhombus is 52 cm, and one of its diagonals is 10 cm long.

- Ans
- 1. 120 cm^2
 - 2. 164 cm^2
 - 3. 160 cm^2
 - 4. 144 cm^2

Question ID : 26433080062
 Option 1 ID : 264330314197
 Option 2 ID : 264330314199
 Option 3 ID : 264330314196
 Option 4 ID : 264330314198
 Status : Not Attempted and Marked For Review
 Chosen Option : --

Q.28 The speed of a boat in still water is 20 km/h, while the river is flowing at a speed of 8 km/h and the time taken to cover a certain distance upstream is 6 h more than the time taken to cover the same distance downstream. Find the distance.

- Ans
- 1. 120 km
 - 2. 336 km
 - 3. 126 km
 - 4. 125 km

Question ID : 26433083049
 Option 1 ID : 264330326030
 Option 2 ID : 264330326032
 Option 3 ID : 264330326029
 Option 4 ID : 264330326031
 Status : Not Attempted and Marked For Review
 Chosen Option : --

Q.29 In an election between P and Q, P gets 40% of the total votes and thus loses by 10 votes. The total number of votes is:

- Ans
- 1. 80
 - 2. 50
 - 3. 90
 - 4. 70

Question ID : 264330145039
 Option 1 ID : 264330568412
 Option 2 ID : 264330568414
 Option 3 ID : 264330568413
 Option 4 ID : 264330568411
 Status : Answered
 Chosen Option : 2

Q.30 The price of a treadmill is marked at ₹1,250. A shopkeeper earns a profit of 14% after allowing a discount of 14% on the marked price. Find the cost price (to the nearest rupee) of the treadmill.

- Ans
- 1. ₹845
 - 2. ₹840
 - 3. ₹1,043
 - 4. ₹943

Question ID : 264330104352
Option 1 ID : 264330409711
Option 2 ID : 264330409712
Option 3 ID : 264330409709
Option 4 ID : 264330409710
Status : Answered
Chosen Option : 4

Q.31 Jeevan can do a piece of work alone in 42 days, while Rishi and Jeevan together can do the same piece of work in 27 days. How many days will Rishi take to complete the same piece of work alone?

- Ans
- 1. $74\frac{3}{5}$
 - 2. $75\frac{1}{5}$
 - 3. $75\frac{4}{5}$
 - 4. $75\frac{3}{5}$

Question ID : 264330103285
Option 1 ID : 264330405445
Option 2 ID : 264330405446
Option 3 ID : 264330405448
Option 4 ID : 264330405447
Status : Answered
Chosen Option : 4

Q.32 A person covers 28 km while walking at a speed of 8 km/h. How much distance (in km) will he cover in same time if he walks at a speed of 6 km/h?

- Ans
- 1. 36
 - 2. 28
 - 3. 32
 - 4. 21

Question ID : 264330121721
Option 1 ID : 264330477058
Option 2 ID : 264330477056
Option 3 ID : 264330477057
Option 4 ID : 264330477055
Status : Answered
Chosen Option : 4

Q.33 The area of an equilateral triangle is 173.2 cm^2 . Its side will be _____.

- Ans 1. 20 cm
 2. 22 cm
 3. 17.32 cm
 4. 21.32 cm

Question ID : 264330145121
Option 1 ID : 264330568740
Option 2 ID : 264330568742
Option 3 ID : 264330568739
Option 4 ID : 264330568741

Status : Not Attempted and
Marked For Review

Chosen Option : --

Q.34 In two circles centred at O and O', the distance between the centres of both circles is 17 cm. The points of contact of a direct common tangent between the circles are P and Q. If the radii of both circles are 7 cm and 15 cm, respectively, then the length of PQ is equal to:

- Ans 1. 15 cm
 2. 17 cm
 3. 10 cm
 4. 22 cm

Question ID : 264330165495
Option 1 ID : 264330649061
Option 2 ID : 264330649062
Option 3 ID : 264330649059
Option 4 ID : 264330649060

Status : Answered

Chosen Option : 1

Q.35 If 4 men or 6 boys can finish a piece of work in 20 days, then in how many days can 6 men and 11 boys finish the same work?

- Ans 1. 5
 2. 6
 3. 7
 4. 8

Question ID : 26433082416
Option 1 ID : 264330323497
Option 2 ID : 264330323498
Option 3 ID : 264330323499
Option 4 ID : 264330323500

Status : Answered

Chosen Option : 2

Q.36 Aditya sold article X at a profit of 23% and article Y at a loss of 13%. He earned a profit of ₹180 in the entire transaction. If article X costs ₹90 less than article Y, then what is the price of article Y (in ₹)?

Ans 1. 2,100

2. 2,007

3. 2,020

4. 2,050

Question ID : 264330131520

Option 1 ID : 264330515186

Option 2 ID : 264330515183

Option 3 ID : 264330515184

Option 4 ID : 264330515185

Status : Not Attempted and
Marked For Review

Chosen Option : --

Q.37 If $\sin 2A = \cos 15^\circ$, then the smallest positive value of A is:

Ans 1. 75°

2. 37.5°

3. 7.5°

4. 47.5°

Question ID : 264330157745

Option 1 ID : 264330618340

Option 2 ID : 264330618339

Option 3 ID : 264330618342

Option 4 ID : 264330618341

Status : Answered

Chosen Option : 2

Q.38 In an election, Ajay and Mohan are contesting for the Secretary post in a trade union of 9000 workers. 80% of the workers cast their votes, out of which 20% votes were found invalid. Ajay defeated Mohan by 1152 votes. How many votes did Ajay get?

Ans 1. 3456

2. 2304

3. 4480

4. 3546

Question ID : 264330103312

Option 1 ID : 264330405553

Option 2 ID : 264330405555

Option 3 ID : 264330405556

Option 4 ID : 264330405554

Status : Not Attempted and
Marked For Review

Chosen Option : --

Q.39 Find the third proportional to 16 and 20.

- Ans 1. 25
 2. 23
 3. 24
 4. 26

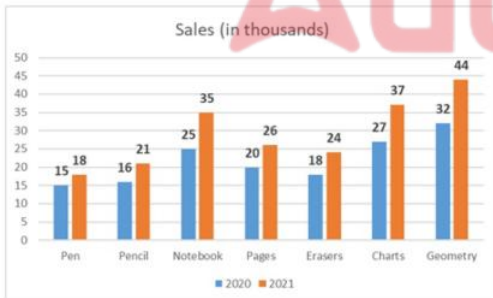
Question ID : 264330145046
 Option 1 ID : 264330568441
 Option 2 ID : 264330568439
 Option 3 ID : 264330568440
 Option 4 ID : 264330568442
 Status : Answered
 Chosen Option : 1

Q.40 The area of a sector of a circle of radius 8 cm, formed by an arc of length 4.6 cm, is

- Ans 1. 6.3 cm^2
 2. 9.2 cm^2
 3. 18.4 cm^2
 4. 12.6 cm^2

Question ID : 264330165440
 Option 1 ID : 264330648842
 Option 2 ID : 264330648839
 Option 3 ID : 264330648840
 Option 4 ID : 264330648841
 Status : Not Attempted and Marked For Review
 Chosen Option : --

Q.41 Following is the figure showing the sales of different items of a stationery shop. Which product recorded the highest percentage change from 2020 to 2021?



- Ans 1. Geometry
 2. Notebook
 3. Charts
 4. Pages

Question ID : 26433081649
 Option 1 ID : 264330320431
 Option 2 ID : 264330320429
 Option 3 ID : 264330320430
 Option 4 ID : 264330320432
 Status : Not Attempted and Marked For Review
 Chosen Option : --

Q.42 A solid sphere made of wax of radius 12 cm is melted and cast into solid hemispheres of radius 4 cm each. Find the number of such solid hemispheres.

Ans 1. 54

2. 27

3. 14

4. 28

Question ID : 264330145107

Option 1 ID : 264330568685

Option 2 ID : 264330568683

Option 3 ID : 264330568684

Option 4 ID : 264330568686

Status : Not Attempted and
Marked For Review

Chosen Option : --

Q.43 The curved surface area (CSA) and the total surface area (TSA) of a hemisphere whose radius is 7 cm are:

Ans 1. CSA – 350 cm²; TSA – 500 cm²

2. CSA – 320 cm²; TSA – 480 cm²

3. CSA – 412 cm²; TSA – 544 cm²

4. CSA – 308 cm²; TSA – 462 cm²

Question ID : 264330103750

Option 1 ID : 264330407307


Option 2 ID : 264330407306

Option 3 ID : 264330407308

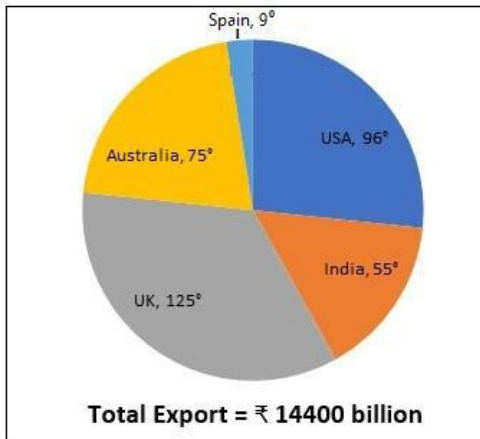
Option 4 ID : 264330407305

Status : Not Attempted and
Marked For Review

Chosen Option : --



Q.44 Study the given pie-chart and answer the question that follows.
The pie-chart is about Country-wise Global Exports Presentation.



By how much does the value of the exports of UK exceed that of Australia (in ₹ billion)?

- Ans
- 1. 1,500
 - 2. 2,000
 - 3. 1,440
 - 4. 2,550

Question ID : 264330158280
Option 1 ID : 264330620480
Option 2 ID : 264330620481
Option 3 ID : 264330620479
Option 4 ID : 264330620482

Status : Not Attempted and
Marked For Review

Chosen Option : --

Q.45 If the radius of a sphere is doubled, then its surface area will be increased by:

- Ans
- 1. 100%
 - 2. 200%
 - 3. 300%
 - 4. 400%

Question ID : 264330104213
Option 1 ID : 264330409153
Option 2 ID : 264330409154
Option 3 ID : 264330409155
Option 4 ID : 264330409156

Status : Answered

Chosen Option : 4

Q.46 Study the given table and answer the question that follows.

The table shows the number of pages printed by four printers in three days.

Days	Printers			
	A	B	C	D
Friday	350	451	412	206
Saturday	420	325	365	251
Sunday	238	198	258	326

What is the respective ratio between total number of pages printed by printer D on Friday and Sunday together and total number of pages printed by printer A on Friday and Saturday together?

Ans 1. 34 : 51

2. 38 : 55

3. 51 : 34

4. 55 : 38

Question ID : 264330158263

Option 1 ID : 264330620413

Option 2 ID : 264330620412

Option 3 ID : 264330620414

Option 4 ID : 264330620411

Status : Answered

Chosen Option : 1

Q.47 Find the third proportional to 23 and 31.

Ans

1. $\frac{31}{23}$

2. $\frac{961}{23}$

3. $\frac{23}{31}$

4. $\frac{23}{961}$

Question ID : 264330103972

Option 1 ID : 264330408191

Option 2 ID : 264330408192

Option 3 ID : 264330408190

Option 4 ID : 264330408189

Status : Answered

Chosen Option : 2

Q.48 A speedboat, whose speed in 20 km/h in still water, goes 35 km downstream and comes back in a total of 8 hours. What is the speed of the stream?

- Ans
- 1. 20 km/h
 - 2. 10 km/h
 - 3. 15 km/h
 - 4. 5 km/h

Question ID : 264330103744
Option 1 ID : 264330407284
Option 2 ID : 264330407282
Option 3 ID : 264330407283
Option 4 ID : 264330407281

Status : Not Attempted and
Marked For Review

Chosen Option : --

Q.49 What is the HCF of 12, 18 and 42?

- Ans
- 1. 123
 - 2. 12
 - 3. 6
 - 4. 60

Question ID : 264330145080
Option 1 ID : 264330568578
Option 2 ID : 264330568576
Option 3 ID : 264330568575
Option 4 ID : 264330568577

Status : Answered

Chosen Option : 3

Q.50 If 60 litres of a milk solution has 40% milk in it, then how much milk should be added to make the milk 60% in the solution?

- Ans
- 1. 30 litres
 - 2. 25 litres
 - 3. 20 litres
 - 4. 35 litres

Question ID : 264330104487
Option 1 ID : 264330410250
Option 2 ID : 264330410251
Option 3 ID : 264330410249
Option 4 ID : 264330410252

Status : Not Answered

Chosen Option : --

Section : English Comprehension

Q.1 Select the most appropriate option that can substitute the underlined idiom/phrase in the given sentence.
You cannot throw dust into my eyes.

- Ans
- 1. terrify me
 - 2. hurt me
 - 3. abuse me
 - 4. mislead or deceive me

Question ID : 264330117252
 Option 1 ID : 264330461067
 Option 2 ID : 264330461065
 Option 3 ID : 264330461066
 Option 4 ID : 264330461068
 Status : Answered
 Chosen Option : 4

Q.2 Select the most appropriate option that can substitute the underlined segment in the given sentence.

O' Henry's short stories are read all over the world till now because they are pithy.

- Ans
- 1. fascinating and lengthy
 - 2. elusive and unreal
 - 3. exaggerated yet short
 - 4. concise and expressive

Question ID : 26433099879
 Option 1 ID : 264330392107
 Option 2 ID : 264330392105
 Option 3 ID : 264330392106
 Option 4 ID : 264330392108
 Status : Answered
 Chosen Option : 4

Q.3 Select the most appropriate meaning of the given idiom.
A plum job

- Ans
- 1. An easy and pleasant job
 - 2. A rare job
 - 3. A difficult job
 - 4. A job involving extensive travelling

Question ID : 264330134218
 Option 1 ID : 264330525868
 Option 2 ID : 264330525867
 Option 3 ID : 264330525869
 Option 4 ID : 264330525870
 Status : Answered
 Chosen Option : 1

Q.4 Select the most appropriate option that can substitute the underlined segment in the given sentence. If there is no need to substitute it, select 'No substitution'.
I like to read books, but my brother prefers to watching movies.

- Ans
- 1. in watching
 - 2. to watch
 - 3. on watching
 - 4. No substitution

Question ID : 264330137493
Option 1 ID : 264330538593
Option 2 ID : 264330538591
Option 3 ID : 264330538592
Option 4 ID : 264330538594
Status : Answered
Chosen Option : 2

Q.5 Select the most appropriate ANTONYM of the given word.
Glad

- Ans
- 1. Keen
 - 2. Loyal
 - 3. Sad
 - 4. Pleased

Question ID : 264330164170
Option 1 ID : 264330643933
Option 2 ID : 264330643934
Option 3 ID : 264330643932
Option 4 ID : 264330643931
Status : Answered
Chosen Option : 3

Q.6 The following sentence has been split into four segments. Identify the segment that contains a grammatical error.

There is a spectrum / of seas around that / land which attracts / tourists of all aging.

- Ans
- 1. tourists of all aging.
 - 2. There is a spectrum
 - 3. land which attracts
 - 4. of seas around that

Question ID : 26433091958
Option 1 ID : 264330361172
Option 2 ID : 264330361169
Option 3 ID : 264330361171
Option 4 ID : 264330361170
Status : Answered
Chosen Option : 1

Q.7 Select the most appropriate meaning of the underlined word.
Saurabh imitates his boss perfectly.

- Ans
- 1. Admires
 - 2. Worships
 - 3. Copies
 - 4. Hates

Question ID : 264330121039
Option 1 ID : 264330474363
Option 2 ID : 264330474365
Option 3 ID : 264330474364
Option 4 ID : 264330474366

Status : Answered
Chosen Option : 4

Q.8 Select the most appropriate synonym of the given word.
Unequivocal

- Ans
- 1. Complete
 - 2. Articulate
 - 3. Unambiguous
 - 4. Doubted

Question ID : 26433099853
Option 1 ID : 264330392010
Option 2 ID : 264330392012
Option 3 ID : 264330392009
Option 4 ID : 264330392011

Status : Answered
Chosen Option : 4

Q.9 In the following sentence, four words are underlined, out of which one word is incorrectly spelt. Identify the INCORRECTLY spelt word.
Traffic accidents are increasing steadily, and large cities are plaged by traffic congestion. Worst of all is the air pollution caused by internal combustion engine, uninterruptedly.

- Ans
- 1. plaged
 - 2. uninterruptedly
 - 3. congestion
 - 4. combustion

Question ID : 264330132619
Option 1 ID : 264330519571
Option 2 ID : 264330519574
Option 3 ID : 264330519572
Option 4 ID : 264330519573

Status : Answered
Chosen Option : 1

Q.10 Select the most appropriate meaning of the given idiom.
Keep count of

- Ans
- 1. To remind of a deadline
 - 2. To act more politely
 - 3. To remember a total
 - 4. To accept an invitation

Question ID : 26433099653
Option 1 ID : 264330391219
Option 2 ID : 264330391218
Option 3 ID : 264330391217
Option 4 ID : 264330391220
Status : Answered
Chosen Option : 4

Q.11 Select the most appropriate one-word substitution of the given group of words.

A pretence of having a virtuous character, moral or religious beliefs or principles, etc., that one does not really possess.

- Ans
- 1. Shrewdness
 - 2. Naivety
 - 3. Gullibility
 - 4. Hypocrisy

Question ID : 26433090854
Option 1 ID : 264330356825
Option 2 ID : 264330356828
Option 3 ID : 264330356827
Option 4 ID : 264330356826
Status : Answered
Chosen Option : 4

Q.12 Select the most appropriate idiom that can substitute the underlined segment in the given sentence.

He made a mess of that bookcase he was supposed to be repairing.

- Ans
- 1. made a pig's ear
 - 2. had a butcher hook
 - 3. made a clean breast
 - 4. brought a dog's breast

Question ID : 264330164573
Option 1 ID : 264330645480
Option 2 ID : 264330645479
Option 3 ID : 264330645482
Option 4 ID : 264330645481
Status : Not Attempted and
Marked For Review
Chosen Option : --

Q.13 The following sentence has been split into four segments. Identify the segment that contains a grammatical error.
My apartment / in Delhi / is situated / on second floor.

- Ans
- 1. is situated
 - 2. in Delhi
 - 3. My apartment
 - 4. on second floor

Question ID : 264330120572
 Option 1 ID : 264330472532
 Option 2 ID : 264330472534
 Option 3 ID : 264330472531
 Option 4 ID : 264330472533
 Status : Answered
 Chosen Option : 4

Q.14 Select the most appropriate option that can substitute the underlined segment in the given sentence. If there is no need to substitute it, select 'No substitution'.

This case is serious. You need to look into this matter; otherwise, the situation will get out of control soon.

- Ans
- 1. look up
 - 2. look at
 - 3. No substitution
 - 4. look after

Question ID : 26433072295
 Option 1 ID : 264330283485
 Option 2 ID : 264330283484
 Option 3 ID : 264330283487
 Option 4 ID : 264330283486
 Status : Answered
 Chosen Option : 3

Q.15 Select the most appropriate meaning of the given idiom.
Keep a straight face

- Ans
- 1. Become very confused
 - 2. Get on extremely well with someone
 - 3. Not laugh or change your expression even though you want to laugh
 - 4. Make more of an effort

Question ID : 264330135997
 Option 1 ID : 264330532829
 Option 2 ID : 264330532828
 Option 3 ID : 264330532830
 Option 4 ID : 264330532827
 Status : Answered
 Chosen Option : 1

Q.16 Select the option that can be used as a one-word substitute for the given group of words.

Huge fire for celebration

- Ans 1. Campaign
 2. Bonfire
 3. Agenda
 4. Crossfire

Question ID : 26433088756
Option 1 ID : 264330348578
Option 2 ID : 264330348577
Option 3 ID : 264330348580
Option 4 ID : 264330348579
Status : Answered
Chosen Option : 2

Q.17 Identify the option that rectifies the spelling of the incorrectly spelt word in the given sentence.

The disadvantages of listening to music at a loud volume include loss of hearing.

- Ans 1. Lissening
 2. Lose
 3. Heering
 4. Volume

Question ID : 26433089016
Option 1 ID : 264330349601
Option 2 ID : 264330349602
Option 3 ID : 264330349604
Option 4 ID : 264330349603
Status : Answered
Chosen Option : 3

Q.18 Select the most appropriate synonym of the word 'disclosed' in the given sentence and choose the correct option.

The linguist's analysis of the language revealed patterns and structures that were previously unknown.

- Ans 1. Linguist
 2. Patterns
 3. Revealed
 4. Unknown

Question ID : 264330163536
Option 1 ID : 264330641399
Option 2 ID : 264330641401
Option 3 ID : 264330641400
Option 4 ID : 264330641402
Status : Answered
Chosen Option : 3

Q.19 Select the INCORRECTLY spelt word.

- Ans 1. Gllidder
 2. Airplane
 3. Helicopter
 4. Ladybug

Question ID : 26433089011
Option 1 ID : 264330349582
Option 2 ID : 264330349581
Option 3 ID : 264330349583
Option 4 ID : 264330349584
Status : Answered
Chosen Option : 1

Q.20 Select the most appropriate meaning of the underlined word.
We shouldn't blame or envy anyone.

- Ans 1. Love
 2. Jealousy
 3. Curse
 4. Reap

Question ID : 264330121038
Option 1 ID : 264330474361
Option 2 ID : 264330474362
Option 3 ID : 264330474360
Option 4 ID : 264330474359
Status : Answered
Chosen Option : 3

Q.21 Select the option that can be used as a one-word substitute for the given group of words.

Minimum people needed for a meeting

- Ans 1. Forum
 2. Quorum
 3. Addendum
 4. Decorum

Question ID : 26433073673
Option 1 ID : 264330288833
Option 2 ID : 264330288835
Option 3 ID : 264330288834
Option 4 ID : 264330288832
Status : Answered
Chosen Option : 1

Q.22 Select the option that can be used as a one-word substitute for the given group of words.

Detailed list of goods dispatched with quantity and price to the purchaser.

- Ans
- 1. Ledger
 - 2. Sales
 - 3. Receipt
 - 4. Invoice

Question ID : 26433088807
Option 1 ID : 264330348783
Option 2 ID : 264330348784
Option 3 ID : 264330348782
Option 4 ID : 264330348781
Status : Answered
Chosen Option : 4

Q.23 Select the grammatically correct sentence.

- Ans
- 1. The simple mistake which was committed by the boy haunted her for years.
 - 2. An simple mistake which was committed by the boy haunted her for years.
 - 3. A simple mistake which was committed by an boy haunted her for years.
 - 4. The simple mistake which was committed by a boy haunted her for years.

Question ID : 264330117215
Option 1 ID : 264330460924
Option 2 ID : 264330460921
Option 3 ID : 264330460923
Option 4 ID : 264330460922
Status : Answered
Chosen Option : 1

Q.24 Select the most appropriate synonym of the given word.

Vulnerable

- Ans
- 1. Susceptible
 - 2. Guarded
 - 3. Amiable
 - 4. Delectable

Question ID : 264330163394
Option 1 ID : 264330640857
Option 2 ID : 264330640858
Option 3 ID : 264330640855
Option 4 ID : 264330640856
Status : Answered
Chosen Option : 1

Q.25 Select the most appropriate synonym of the given word.

Benevolent

- Ans 1. Generous
 2. Innocent
 3. Cruel
 4. Wicked

Question ID : 264330163357
Option 1 ID : 264330640719
Option 2 ID : 264330640721
Option 3 ID : 264330640722
Option 4 ID : 264330640720
Status : Answered
Chosen Option : 1

Q.26 In the following sentence, four words are underlined, out of which one word is incorrectly spelt. Identify the INCORRECTLY spelt word.
The ruins of many structures that still stand tall in their granduer are testimony to the fact that Mewar was not only the land of the courageous .

- Ans 1. testimony
 2. courageous
 3. granduer
 4. ruins

Question ID : 264330123786
Option 1 ID : 264330485082
Option 2 ID : 264330485083
Option 3 ID : 264330485081
Option 4 ID : 264330485080
Status : Answered
Chosen Option : 3

Q.27 Select the option that can be used as a one-word substitute for the given group of words.

To criticise someone severely

- Ans 1. Rate
 2. Remonstrate
 3. Chastise
 4. Scoff

Question ID : 26433088441
Option 1 ID : 264330347351
Option 2 ID : 264330347349
Option 3 ID : 264330347350
Option 4 ID : 264330347352
Status : Answered
Chosen Option : 4

Q.28 Select the most appropriate one-word substitution of the given group of words.

A state of intense happiness and self-confidence.

- Ans 1. Euphoria
 2. Intoxication
 3. Touché
 4. Oblivion

Question ID : 26433090855
Option 1 ID : 264330356832
Option 2 ID : 264330356830
Option 3 ID : 264330356829
Option 4 ID : 264330356831
Status : Answered
Chosen Option : 1

Q.29 Select the option that can be used as a one-word substitute for the given group of words.

To make a low continuous vibratory sound expressing contentment (of a cat).

- Ans 1. To meow
 2. To purr
 3. To buzz
 4. To roar

Question ID : 26433088972
Option 1 ID : 264330349428
Option 2 ID : 264330349427
Option 3 ID : 264330349425
Option 4 ID : 264330349426
Status : Answered
Chosen Option : 1

Q.30 Select the most appropriate meaning of the given idiom.

Face the music

- Ans 1. To work every possible way to succeed
 2. To accept punishment for some mistake which you have done
 3. To be cheated by someone you trust
 4. To have the problems with money

Question ID : 26433092077
Option 1 ID : 264330361632
Option 2 ID : 264330361629
Option 3 ID : 264330361631
Option 4 ID : 264330361630
Status : Answered
Chosen Option : 2

Q.31 Select the most appropriate idiom to fill in the blank.

I was going to mention it, but it _____.

- Ans
- 1. brought to mind
 - 2. changed my mind
 - 3. bore in mind
 - 4. slipped my mind

Question ID : 264330163336
Option 1 ID : 264330640643
Option 2 ID : 264330640646
Option 3 ID : 264330640645
Option 4 ID : 264330640644
Status : Answered
Chosen Option : 4

Q.32 Select the most appropriate phrasal verb to fill in the blank.
Though Pradeep _____ for Jamaica, he landed up in Nigeria.

- Ans
- 1. set aside
 - 2. set about
 - 3. set out
 - 4. set up

Question ID : 26433084919
Option 1 ID : 264330333400
Option 2 ID : 264330333398
Option 3 ID : 264330333399
Option 4 ID : 264330333397
Status : Answered
Chosen Option : 3

Q.33 Select the most appropriate ANTONYM of the given word.
Specific

- Ans
- 1. Topple
 - 2. Lawful
 - 3. Random
 - 4. Stroll

Question ID : 264330164273
Option 1 ID : 264330644317
Option 2 ID : 264330644318
Option 3 ID : 264330644315
Option 4 ID : 264330644316
Status : Answered
Chosen Option : 3

Q.34 Select the most appropriate ANTONYM of the given word.

Beneficent

- Ans 1. Cruel
 2. Lethargic
 3. Soft
 4. Friendly

Question ID : 264330163396
Option 1 ID : 264330640864
Option 2 ID : 264330640866
Option 3 ID : 264330640863
Option 4 ID : 264330640865
Status : Answered
Chosen Option : 1

Q.35 Select the most appropriate meaning of the given idiom.

Grasping at straws

- Ans 1. Trying to find the best way to compete with others when nothing you choose is likely to work
 2. Trying to find some way to succeed when you see others are also doing the same
 3. Trying to find some way to succeed when nothing you choose is likely to work
 4. Trying to find manipulative ways to succeed

Question ID : 264330163431
Option 1 ID : 264330641001
Option 2 ID : 264330640999
Option 3 ID : 264330641002
Option 4 ID : 264330641000
Status : Not Attempted and Marked For Review
Chosen Option : --

Q.36 Select the most appropriate ANTONYM of the given word.

Contempt

- Ans 1. Mockery
 2. Deny
 3. Regard
 4. Immoral

Question ID : 264330163362
Option 1 ID : 264330640740
Option 2 ID : 264330640741
Option 3 ID : 264330640742
Option 4 ID : 264330640739
Status : Answered
Chosen Option : 3

Q.37 Select the option that can be used as a one-word substitute for the given group of words.

No longer used because something new has been invented

- Ans
- 1. Classic
 - 2. Ancient
 - 3. Ornamental
 - 4. Obsolete

Question ID : 26433088196
 Option 1 ID : 264330346378
 Option 2 ID : 264330346380
 Option 3 ID : 264330346379
 Option 4 ID : 264330346377
 Status : Answered
 Chosen Option : 4

Q.38 Select the most appropriate idiom or phrase to complete the given sentence.

I like her because she never likes to make _____.

- Ans
- 1. a slap on the wrist
 - 2. a drop in the bucket
 - 3. a bed of roses
 - 4. a quick buck

Question ID : 26433099136
 Option 1 ID : 264330389159
 Option 2 ID : 264330389157
 Option 3 ID : 264330389158
 Option 4 ID : 264330389160
 Status : Not Attempted and Marked For Review
 Chosen Option : --

Q.39 Select the sentence that has a spelling error.

- A- A fisherman, enfeebled with age, could no longer go out to sea so he began fishing in the river.
- B- Every morning he would go down to the river and sit there fishing the whole day long.
- C- In the evening, he would sell whatever he had caught, buy food for himself and go home.
- D- One hot afternoon, while he was bemoaning his fate, a large bird alited near him.

- Ans
- 1. One hot afternoon, while he was bemoaning his fate, a large bird alited near him.
 - 2. In the evening, he would sell whatever he had caught, buy food for himself and go home.
 - 3. A fisherman, enfeebled with age, could no longer go out to sea so he began fishing in the river.
 - 4. Every morning he would go down to the river and sit there fishing the whole day long.

Question ID : 264330141563
 Option 1 ID : 264330554590
 Option 2 ID : 264330554589
 Option 3 ID : 264330554587
 Option 4 ID : 264330554588
 Status : Answered
 Chosen Option : 3

Q.40 Choose the most appropriate meaning of the underlined phrase.
Ram could not go to Delhi for vacation since he was banking on his arrears of pay which he did not get in time

- Ans**
- 1. Sloping on
 - 2. Depending on his bank
 - 3. Calling on
 - 4. Relying on

Question ID : 264330137453

Option 1 ID : 264330538435

Option 2 ID : 264330538437

Option 3 ID : 264330538436

Option 4 ID : 264330538438

Status : **Not Attempted and
Marked For Review**

Chosen Option : --

Comprehension:

In the following passage, some words have been deleted. Read the passage carefully and select the most appropriate option to fill in each blank.

When another old cave is discovered in the south of France, it is not (1)_____ in news. Rather, it is an ordinary event. Such discoveries are so (2)_____ these days that hardly anybody pays heed to them. However, when the Lascaux cave complex was discovered in 1940, the world was (3)_____. Painted directly on its walls were hundreds of scenes showing how people lived thousands of years ago. The scenes show people hunting animals, such as bison or wild cats. Other images (4)_____ birds and, most noticeably, horses, which appear in more than 300 wall images, by far (5)_____ all other animals.

SubQuestion No : 41

Q.41 Select the most appropriate option to fill in blank number 1.

- Ans**
- 1. suitably
 - 2. nearly
 - 3. merrily
 - 4. usually

Question ID : 264330163292

Option 1 ID : 264330640467

Option 2 ID : 264330640469

Option 3 ID : 264330640468

Option 4 ID : 264330640470

Status : **Answered**

Chosen Option : 4

Comprehension:

In the following passage, some words have been deleted. Read the passage carefully and select the most appropriate option to fill in each blank.

When another old cave is discovered in the south of France, it is not (1)_____ in news. Rather, it is an ordinary event. Such discoveries are so (2)_____ these days that hardly anybody pays heed to them. However, when the Lascaux cave complex was discovered in 1940, the world was (3)_____. Painted directly on its walls were hundreds of scenes showing how people lived thousands of years ago. The scenes show people hunting animals, such as bison or wild cats. Other images (4)_____ birds and, most noticeably, horses, which appear in more than 300 wall images, by far (5)_____ all other animals.

SubQuestion No : 42

Q.42 Select the most appropriate option to fill in blank number 2.

- Ans 1. disorderly
 2. frequent
 3. ghastly
 4. delusional

Question ID : 264330163293

Option 1 ID : 264330640471

Option 2 ID : 264330640472

Option 3 ID : 264330640474

Option 4 ID : 264330640473

Status : Answered

Chosen Option : 3

Comprehension:

In the following passage, some words have been deleted. Read the passage carefully and select the most appropriate option to fill in each blank.

When another old cave is discovered in the south of France, it is not (1)_____ in news. Rather, it is an ordinary event. Such discoveries are so (2)_____ these days that hardly anybody pays heed to them. However, when the Lascaux cave complex was discovered in 1940, the world was (3)_____. Painted directly on its walls were hundreds of scenes showing how people lived thousands of years ago. The scenes show people hunting animals, such as bison or wild cats. Other images (4)_____ birds and, most noticeably, horses, which appear in more than 300 wall images, by far (5)_____ all other animals.

SubQuestion No : 43

Q.43 Select the most appropriate option to fill in blank number 3.

- Ans 1. baffled
 2. overthrown
 3. encouraged
 4. crushed

Question ID : 264330163294

Option 1 ID : 264330640475

Option 2 ID : 264330640476

Option 3 ID : 264330640477

Option 4 ID : 264330640478

Status : Answered

Chosen Option : 1

Comprehension:

In the following passage, some words have been deleted. Read the passage carefully and select the most appropriate option to fill in each blank.

When another old cave is discovered in the south of France, it is not (1)_____ in news. Rather, it is an ordinary event. Such discoveries are so (2)_____ these days that hardly anybody pays heed to them. However, when the Lascaux cave complex was discovered in 1940, the world was (3)_____. Painted directly on its walls were hundreds of scenes showing how people lived thousands of years ago. The scenes show people hunting animals, such as bison or wild cats. Other images (4)_____ birds and, most noticeably, horses, which appear in more than 300 wall images, by far (5)_____ all other animals.

SubQuestion No : 44

Q.44 Select the most appropriate option to fill in blank number 4.

- Ans 1. imprint
 2. depict
 3. require
 4. determine

Question ID : 264330163295

Option 1 ID : 264330640482

Option 2 ID : 264330640481

Option 3 ID : 264330640479

Option 4 ID : 264330640480

Status : Answered

Chosen Option : 2

Comprehension:

In the following passage, some words have been deleted. Read the passage carefully and select the most appropriate option to fill in each blank.

When another old cave is discovered in the south of France, it is not (1)_____ in news. Rather, it is an ordinary event. Such discoveries are so (2)_____ these days that hardly anybody pays heed to them. However, when the Lascaux cave complex was discovered in 1940, the world was (3)_____. Painted directly on its walls were hundreds of scenes showing how people lived thousands of years ago. The scenes show people hunting animals, such as bison or wild cats. Other images (4)_____ birds and, most noticeably, horses, which appear in more than 300 wall images, by far (5)_____ all other animals.

SubQuestion No : 45

Q.45 Select the most appropriate option to fill in blank number 5.

- Ans 1. outnumbering
 2. outsourcing
 3. outlasting
 4. outreaching

Question ID : 264330163296

Option 1 ID : 264330640486

Option 2 ID : 264330640483

Option 3 ID : 264330640485

Option 4 ID : 264330640484

Status : Not Attempted and
Marked For Review

Chosen Option : --

Comprehension:

Read the given passage and answer the questions that follow.

Climate policy must now put health at the centre and promote climate change mitigation policies that bring health benefits simultaneously. Health-focused climate policy would help bring about a planet that has cleaner air, more abundant and safer freshwater and food, more effective and fairer health and social protection systems and, as a result, healthier people. Investment in clean energy will yield health gains that repay those investments twice over. There are proven interventions able to reduce emissions of short-lived climate pollutants, for instance applying higher standards for vehicle emissions, which have been calculated to save approximately 2.4 million lives per year, through improved air quality and reduce global warming by about 0.5°C by 2050. The cost of renewable sources of energy has decreased significantly in the last few years, and solar energy is now cheaper than coal or gas in most major economies.

SubQuestion No : 46

Q.46 What is the ANTONYM for the word 'intervention', from the passage?

- Ans
- 1. Specific
 - 2. Evidence
 - 3. Non-involvement
 - 4. Data

Question ID : 264330136030

Option 1 ID : 264330532939

Option 2 ID : 264330532942

Option 3 ID : 264330532941

Option 4 ID : 264330532940

Status : Answered

Chosen Option : 3

Comprehension:

Read the given passage and answer the questions that follow.

Climate policy must now put health at the centre and promote climate change mitigation policies that bring health benefits simultaneously. Health-focused climate policy would help bring about a planet that has cleaner air, more abundant and safer freshwater and food, more effective and fairer health and social protection systems and, as a result, healthier people. Investment in clean energy will yield health gains that repay those investments twice over. There are proven interventions able to reduce emissions of short-lived climate pollutants, for instance applying higher standards for vehicle emissions, which have been calculated to save approximately 2.4 million lives per year, through improved air quality and reduce global warming by about 0.5°C by 2050. The cost of renewable sources of energy has decreased significantly in the last few years, and solar energy is now cheaper than coal or gas in most major economies.

SubQuestion No : 47

Q.47 What is the ANTONYM for the word 'promote', from the passage?

- Ans
- 1. Conduct
 - 2. Obstruct
 - 3. Invade
 - 4. Exclude

Question ID : 264330136028

Option 1 ID : 264330532932

Option 2 ID : 264330532931

Option 3 ID : 264330532933

Option 4 ID : 264330532934

Status : Answered

Chosen Option : 2

Comprehension:

Read the given passage and answer the questions that follow.

Climate policy must now put health at the centre and promote climate change mitigation policies that bring health benefits simultaneously. Health-focused climate policy would help bring about a planet that has cleaner air, more abundant and safer freshwater and food, more effective and fairer health and social protection systems and, as a result, healthier people. Investment in clean energy will yield health gains that repay those investments twice over. There are proven interventions able to reduce emissions of short-lived climate pollutants, for instance applying higher standards for vehicle emissions, which have been calculated to save approximately 2.4 million lives per year, through improved air quality and reduce global warming by about 0.5°C by 2050. The cost of renewable sources of energy has decreased significantly in the last few years, and solar energy is now cheaper than coal or gas in most major economies.

SubQuestion No : 48

Q.48 Which of the following represents the structure of the passage?

- Ans
- 1. Chronology
 - 2. Critique
 - 3. Problem-solution
 - 4. Definition

Question ID : 264330136029

Option 1 ID : 264330532936

Option 2 ID : 264330532937

Option 3 ID : 264330532938

Option 4 ID : 264330532935

Status : Answered

Chosen Option : 3

Comprehension:

Read the given passage and answer the questions that follow.

Climate policy must now put health at the centre and promote climate change mitigation policies that bring health benefits simultaneously. Health-focused climate policy would help bring about a planet that has cleaner air, more abundant and safer freshwater and food, more effective and fairer health and social protection systems and, as a result, healthier people. Investment in clean energy will yield health gains that repay those investments twice over. There are proven interventions able to reduce emissions of short-lived climate pollutants, for instance applying higher standards for vehicle emissions, which have been calculated to save approximately 2.4 million lives per year, through improved air quality and reduce global warming by about 0.5°C by 2050. The cost of renewable sources of energy has decreased significantly in the last few years, and solar energy is now cheaper than coal or gas in most major economies.

SubQuestion No : 49

Q.49 Which of the following most accurately states the central idea of the passage?

- Ans
- 1. Greenhouse gases
 - 2. Pollution
 - 3. Climate policy for health
 - 4. Fossil fuels

Question ID : 264330136026

Option 1 ID : 264330532924

Option 2 ID : 264330532923

Option 3 ID : 264330532925

Option 4 ID : 264330532926

Status : Answered

Chosen Option : 2

Comprehension:

Read the given passage and answer the questions that follow.

Climate policy must now put health at the centre and promote climate change mitigation policies that bring health benefits simultaneously. Health-focused climate policy would help bring about a planet that has cleaner air, more abundant and safer freshwater and food, more effective and fairer health and social protection systems and, as a result, healthier people. Investment in clean energy will yield health gains that repay those investments twice over. There are proven interventions able to reduce emissions of short-lived climate pollutants, for instance applying higher standards for vehicle emissions, which have been calculated to save approximately 2.4 million lives per year, through improved air quality and reduce global warming by about 0.5°C by 2050. The cost of renewable sources of energy has decreased significantly in the last few years, and solar energy is now cheaper than coal or gas in most major economies.

SubQuestion No : 50

Q.50 Which is the best description of the tone of the passage?

- Ans
- 1. Biased
 - 2. Cynical
 - 3. Technical
 - 4. Humanistic

Question ID : 264330136027

Option 1 ID : 264330532927

Option 2 ID : 264330532928

Option 3 ID : 264330532929

Option 4 ID : 264330532930

Status : Answered

Chosen Option : 4