

Delhi Police Constable (Exe)

Previous Year Paper
20 Nov, 2023 Shift 2



Test Prime

**ALL EXAMS,
ONE SUBSCRIPTION**



70,000+
Mock Tests



**Personalised
Report Card**



**Unlimited
Re-Attempt**



600+
Exam Covered



**Previous Year
Papers**



500%
Refund



ATTEMPT FREE MOCK NOW

Constable Executive Male and Female in Delhi Police Examination 2023

Roll Number	
Candidate Name	
Venue Name	
Exam Date	20/11/2023
Exam Time	12:00 PM - 1:30 PM
Subject	Constable Executive Male and Female in Delhi Police Examination 2023

Section : **General Knowledge****Q.1** The Rourkela Steel Plant was developed with the collaboration of _____.

- Ans 1. France
 2. Germany
 3. Japan
 4. Britain

Question ID : 264330181241
Option 1 ID : 264330710890
Option 2 ID : 264330710888
Option 3 ID : 264330710887
Option 4 ID : 264330710889
Status : Answered
Chosen Option : 1

Q.2 The measurement of a kho-kho field must be _____.

- Ans 1. 28 × 15 m
 2. 29 × 16 m
 3. 30 × 15 m
 4. 27 × 16 m

Question ID : 264330110395
Option 1 ID : 264330433858
Option 2 ID : 264330433857
Option 3 ID : 264330433859
Option 4 ID : 264330433860
Status : Answered
Chosen Option : 1

Q.3 Who was the Minister of Finance when the economic reforms of 1991 took place in India?

- Ans 1. Mr. Bimal Jalan
 2. Mr. P Chidambaram
 3. Mr. Pranab Mukherjee
 4. Dr. Manmohan Singh

Question ID : 264330109119
Option 1 ID : 264330428756
Option 2 ID : 264330428754
Option 3 ID : 264330428755
Option 4 ID : 264330428753
Status : Answered
Chosen Option : 4

Q.4 Kavadi Aattam is a major folk dance form of which of the following states of India?

- Ans 1. Tamil Nadu
 2. Kerala
 3. Sikkim
 4. Karnataka

Question ID : 26433011791
 Option 1 ID : 264330439250
 Option 2 ID : 264330439249
 Option 3 ID : 264330439252
 Option 4 ID : 264330439251
 Status : Answered
 Chosen Option : 2

Q.5 Which of the following nations won the third blind cricket World Cup T20 championship?

- Ans 1. India
 2. Bangladesh
 3. Pakistan
 4. Sri Lanka

Question ID : 264330176927
 Option 1 ID : 264330693904
 Option 2 ID : 264330693906
 Option 3 ID : 264330693905
 Option 4 ID : 264330693903
 Status : Answered
 Chosen Option : 2

Q.6 During the British era Indian economy was known as _____.

- Ans 1. a source for its raw material
 2. a developed economy
 3. only a market for agricultural products
 4. a source for finished capital goods

Question ID : 264330131567
 Option 1 ID : 264330515372
 Option 2 ID : 264330515373
 Option 3 ID : 264330515374
 Option 4 ID : 264330515371
 Status : Answered
 Chosen Option : 3

Q.7 After which incident did Mahatma Gandhi call off the non-cooperation movement?

- Ans 1. Jallianwala Bagh massacre of 1919
 2. Chauri Chaura killing in 1922
 3. Chauri Chaura killing in 1925
 4. Jallianwala Bagh massacre of 1922

Question ID : 264330120150
 Option 1 ID : 264330470856
 Option 2 ID : 264330470855
 Option 3 ID : 264330470857
 Option 4 ID : 264330470858
 Status : Answered
 Chosen Option : 2

Q.8 Which of the following statements is correct with respect to basketball?

- Ans
- 1. Each team is made up of 11 players, with only 7 allowed on the court at any time.
 - 2. Each team is made up of 12 players, with only 5 allowed on the court at any time.
 - 3. Each team is made up of 11 players, with only 4 allowed on the court at any time.
 - 4. Each team is made up of 12 players, with only 8 allowed on the court at any time.

Question ID : 264330113776
 Option 1 ID : 264330447190
 Option 2 ID : 264330447192
 Option 3 ID : 264330447189
 Option 4 ID : 264330447191
 Status : Answered
 Chosen Option : 1

Q.9 Which of the following statements is INCORRECT regarding the collegium system?

- Ans
- 1. This system started in the year 2007.
 - 2. This system was evolved through Supreme Court judgment.
 - 3. It recommends the appointments and transfers of judges.
 - 4. It consists of Chief Justice and four senior judges of Supreme Court.

Question ID : 264330116387
 Option 1 ID : 264330457636
 Option 2 ID : 264330457635
 Option 3 ID : 264330457634
 Option 4 ID : 264330457633
 Status : Answered
 Chosen Option : 2

Q.10 The Communist Party of India was formed in 1925 at the first Party Conference in _____.

- Ans
- 1. Madras
 - 2. Kanpur
 - 3. Bombay
 - 4. Delhi

Question ID : 264330114411
 Option 1 ID : 264330449729
 Option 2 ID : 264330449732
 Option 3 ID : 264330449730
 Option 4 ID : 264330449731
 Status : Answered
 Chosen Option : 1

Q.11 Which of the tides have variations in height?

- Ans
- 1. Mixed tide
 - 2. Semi diurnal tide
 - 3. Diurnal tide
 - 4. Neap tide

Question ID : 264330118520
 Option 1 ID : 264330465484
 Option 2 ID : 264330465482
 Option 3 ID : 264330465483
 Option 4 ID : 264330465481
 Status : Answered
 Chosen Option : 1

Q.12 Which of the following is considered to be the most liquid asset?

- Ans
- 1. Gold
 - 2. Bond
 - 3. Land
 - 4. Money

Question ID : 264330110160
Option 1 ID : 264330432917
Option 2 ID : 264330432918
Option 3 ID : 264330432920
Option 4 ID : 264330432919
Status : Answered
Chosen Option : 4

Q.13 The Republic Day parade, in the year 1955, was organised at which of the following places in Delhi?

- Ans
- 1. Rajghat
 - 2. Old Fort
 - 3. Rajpath
 - 4. Parliament House Street

Question ID : 264330182989
Option 1 ID : 264330717690
Option 2 ID : 264330717688
Option 3 ID : 264330717689
Option 4 ID : 264330717691
Status : Answered
Chosen Option : 3

Q.14 Padma Bhushan awardee Kumari Kamala is an exponent of _____.

- Ans
- 1. Odissi
 - 2. Sattriya
 - 3. Bharatanatyam
 - 4. Mohiniyattam

Question ID : 264330111983
Option 1 ID : 264330440018
Option 2 ID : 264330440019
Option 3 ID : 264330440017
Option 4 ID : 264330440020
Status : Answered
Chosen Option : 1

Q.15 The Vitthal temple of Hampi has _____ columns that produce musical notes.

- Ans
- 1. 75
 - 2. 63
 - 3. 56
 - 4. 49

Question ID : 264330106239
Option 1 ID : 264330417259
Option 2 ID : 264330417258
Option 3 ID : 264330417260
Option 4 ID : 264330417257
Status : Not Answered
Chosen Option : --

Q.16 In the year 2022, Arjun Singh Dhurve was conferred the Padma Shri for his contribution to which of the following dance forms?

- Ans
- 1. Bharatanatyam
 - 2. Baiga Tribal Dance
 - 3. Kathak
 - 4. Chhau

Question ID : 264330120413
Option 1 ID : 264330471904
Option 2 ID : 264330471905
Option 3 ID : 264330471903
Option 4 ID : 264330471906
Status : Answered
Chosen Option : 4

Q.17 Which famous Chinese philosopher and scholar emphasised the importance of ethical values, family relationships and social harmony in his teachings?

- Ans
- 1. Confucius
 - 2. Mao Zedong
 - 3. Sun Tzu
 - 4. Laozi

Question ID : 264330179301
Option 1 ID : 264330703207
Option 2 ID : 264330703210
Option 3 ID : 264330703209
Option 4 ID : 264330703208
Status : Answered
Chosen Option : 4

Q.18 Who among the following gave Tansen the title of 'Mian'?

- Ans
- 1. Shah Jahan
 - 2. Akbar
 - 3. Babur
 - 4. Humayun

Question ID : 264330116427
Option 1 ID : 264330457796
Option 2 ID : 264330457795
Option 3 ID : 264330457793
Option 4 ID : 264330457794
Status : Answered
Chosen Option : 2

Q.19 Which of the following writs is issued by a superior court to compel a lower court or a government officer to perform mandatory or purely ministerial duties correctly?

- Ans
- 1. Quo warranto
 - 2. Certiorari
 - 3. Habeas Corpus
 - 4. Mandamus

Question ID : 264330110794
Option 1 ID : 264330435455
Option 2 ID : 264330435454
Option 3 ID : 264330435453
Option 4 ID : 264330435456
Status : Answered
Chosen Option : 4

Q.20 When was the Sampoorna Grameen Rozgar Yojana launched?

- Ans
- 1. 2000
 - 2. 2001
 - 3. 2003
 - 4. 2002

Question ID : 264330131756
Option 1 ID : 264330516123
Option 2 ID : 264330516124
Option 3 ID : 264330516126
Option 4 ID : 264330516125
Status : Answered
Chosen Option : 4

Q.21 Which of the following is a major inorganic source of food?

- Ans
- 1. Meat
 - 2. Water
 - 3. Grains
 - 4. Vegetables

Question ID : 264330113324
Option 1 ID : 264330445381
Option 2 ID : 264330445384
Option 3 ID : 264330445383
Option 4 ID : 264330445382
Status : Answered
Chosen Option : 1

Q.22 Which report of the Second Administrative Reforms Commission is related to the recommendations on Panchayati Raj?

- Ans
- 1. 5th
 - 2. 4th
 - 3. 6th
 - 4. 3rd

Question ID : 264330130473
Option 1 ID : 264330511005
Option 2 ID : 264330511004
Option 3 ID : 264330511006
Option 4 ID : 264330511003
Status : Not Answered
Chosen Option : --

Q.23 Which of the following is/are meant for promoting the ideals of social and economic democracy?

- Ans
- 1. Single Citizenship
 - 2. Fundamental Duties
 - 3. Co-Operative Societies
 - 4. Directive Principles of State Policy

Question ID : 264330173468
Option 1 ID : 264330680352
Option 2 ID : 264330680354
Option 3 ID : 264330680353
Option 4 ID : 264330680351
Status : Answered
Chosen Option : 4

Q.24 In the mid-eighth century, Dantidurga, a Rashtrakuta chief overthrew his Chalukya overlord and performed a ritual called _____.

- Ans
- 1. Ashvamedha Yajna
 - 2. Rajasuya Yajna
 - 3. Hiranya-Garbha Yajna
 - 4. Deva Yajna

Question ID : 264330182256
Option 1 ID : 264330714847
Option 2 ID : 264330714850
Option 3 ID : 264330714849
Option 4 ID : 264330714848
Status : Answered
Chosen Option : 3

Q.25 On which of the following days is Netaji Subash Chandra Bose's birth anniversary celebrated?

- Ans
- 1. 23 March
 - 2. 14 November
 - 3. 23 January
 - 4. 16 January

Question ID : 264330106210
Option 1 ID : 264330417141
Option 2 ID : 264330417144
Option 3 ID : 264330417142
Option 4 ID : 264330417143
Status : Answered
Chosen Option : 3

Q.26 In which of the following years had Bal Gangadhar Tilak founded the Home League?

- Ans
- 1. 1924
 - 2. 1912
 - 3. 1934
 - 4. 1916

Question ID : 264330118603
Option 1 ID : 264330465664
Option 2 ID : 264330465666
Option 3 ID : 264330465663
Option 4 ID : 264330465665
Status : Answered
Chosen Option : 4

Q.27 The Contingency Fund of India is operated by the _____.

- Ans
- 1. Speaker
 - 2. Finance Minister
 - 3. President
 - 4. Prime Minister

Question ID : 264330110601
Option 1 ID : 264330434684
Option 2 ID : 264330434683
Option 3 ID : 264330434682
Option 4 ID : 264330434681
Status : Answered
Chosen Option : 4

Q.28 Which of the following is NOT a salient feature of liberalisation?

- Ans
- 1. Abolishment of industrial licensing
 - 2. Autonomy to determine the prices
 - 3. Selling part of equity shares of public sector undertakings to public
 - 4. De-reservation of goods for small scale industry

Question ID : 264330111605
 Option 1 ID : 264330438506
 Option 2 ID : 264330438505
 Option 3 ID : 264330438508
 Option 4 ID : 264330438507
 Status : Answered
 Chosen Option : 1

Q.29 Which of the following additions in the Indian Constitution was based on the suggestions of the Swaran Singh Committee?

- Ans
- 1. Emergency Provisions
 - 2. Fundamental Rights
 - 3. Directive Principles of State Policy
 - 4. Fundamental Duties

Question ID : 264330114606
 Option 1 ID : 264330450512
 Option 2 ID : 264330450510
 Option 3 ID : 264330450511
 Option 4 ID : 264330450509
 Status : Answered
 Chosen Option : 4

Q.30 Who among the following had written the 'Kamayani'?

- Ans
- 1. Mahadevi Verma
 - 2. Jaishankar Prasad
 - 3. Sumitranandan Pant
 - 4. Amrita Pritam

Question ID : 26433086913
 Option 1 ID : 264330341293
 Option 2 ID : 264330341295
 Option 3 ID : 264330341296
 Option 4 ID : 264330341294
 Status : Answered
 Chosen Option : 1

Q.31 To grant autonomy to firms, some public sector units were given special status. Which of the following was NOT one of the statuses?

- Ans
- 1. Maharatnas
 - 2. Navratnas
 - 3. Miniratnas
 - 4. Devratnas

Question ID : 264330111619
 Option 1 ID : 264330438561
 Option 2 ID : 264330438562
 Option 3 ID : 264330438563
 Option 4 ID : 264330438564
 Status : Answered
 Chosen Option : 2

Q.32 Which of the following statements about hurricanes is true?

- Ans 1. Related to Western Pacific
 2. Related to Atlantic
 3. Related to Indian ocean
 4. Related to Western Australia

Question ID : 264330131735
 Option 1 ID : 264330516040
 Option 2 ID : 264330516041
 Option 3 ID : 264330516039
 Option 4 ID : 264330516042
 Status : Answered
 Chosen Option : 2

Q.33 Which of the following is the highest peak of Western Ghats?

- Ans 1. Anai Mudi
 2. Doda Betta
 3. Javedi Hills
 4. Mahendra Giri

Question ID : 264330177100
 Option 1 ID : 264330694598
 Option 2 ID : 264330694597
 Option 3 ID : 264330694596
 Option 4 ID : 264330694595
 Status : Answered
 Chosen Option : 1

Q.34 Which of the following claims about abiotic is false?

- Ans 1. Water is an abiotic component of the ecosystem
 2. Abiotic components of the ecosystem were never alive
 3. They are the non-living components of the ecosystem
 4. They are the living components of the ecosystem

Question ID : 264330131728
 Option 1 ID : 264330516011
 Option 2 ID : 264330516013
 Option 3 ID : 264330516012
 Option 4 ID : 264330516014
 Status : Answered
 Chosen Option : 4

Q.35 According to Mughal records, during Akbar's reign, there were 29 Mansabdars with a rank of _____.

- Ans 1. 2,500 zat
 2. 5,000 zat
 3. 7,000 zat
 4. 500 zat

Question ID : 264330106567
 Option 1 ID : 264330418571
 Option 2 ID : 264330418569
 Option 3 ID : 264330418570
 Option 4 ID : 264330418572
 Status : Answered
 Chosen Option : 4

Q.36 Which of the following is an example of the cooperative sector industry?

- Ans
- 1. Steel Authority of India Limited
 - 2. Dabur Industry
 - 3. Coir Industry
 - 4. Bajaj Auto Limited

Question ID : 264330173609
Option 1 ID : 264330680917
Option 2 ID : 264330680918
Option 3 ID : 264330680916
Option 4 ID : 264330680915
Status : Answered
Chosen Option : 1

Q.37 Which of the following was adopted as the 'National Emblem' on 26 January 1950?

- Ans
- 1. Lion capital of Sarnath
 - 2. Single bull capital at Rampurva
 - 3. Single lion capital at Lauriya Nandangarh
 - 4. Single lion capital at Rampurva

Question ID : 264330120482
Option 1 ID : 264330472179
Option 2 ID : 264330472182
Option 3 ID : 264330472181
Option 4 ID : 264330472180
Status : Answered
Chosen Option : 1

Q.38 Pandit S Balesh Bhajantri is a _____ artist.

- Ans
- 1. Sarod
 - 2. Shehnai
 - 3. Sitar
 - 4. Santoor

Question ID : 264330112682
Option 1 ID : 264330442815
Option 2 ID : 264330442814
Option 3 ID : 264330442816
Option 4 ID : 264330442813
Status : Answered
Chosen Option : 3

Q.39 A dispute petition in the election of the President of the India can be filed in:

- Ans
- 1. Both, the Supreme Court of India and the High Court of any state
 - 2. Only the Supreme Court of India
 - 3. Any court within the territory of India
 - 4. Only the Delhi High Court

Question ID : 264330177753
Option 1 ID : 264330697121
Option 2 ID : 264330697119
Option 3 ID : 264330697122
Option 4 ID : 264330697120
Status : Answered
Chosen Option : 2

Q.40 Which of these dances is commonly performed in Odisha?

- Ans
- 1. Grida dance
 - 2. Raas Leela
 - 3. Ghumura
 - 4. Chakyar Koothu

Question ID : 264330109282
 Option 1 ID : 264330429405
 Option 2 ID : 264330429408
 Option 3 ID : 264330429407
 Option 4 ID : 264330429406
 Status : Answered
 Chosen Option : 4

Q.41 Which method was used for making bronze statues during Harrapan Civilisation?

- Ans
- 1. Lost wax casting
 - 2. Ivory carving
 - 3. Stone carving
 - 4. Wood carving

Question ID : 264330109316
 Option 1 ID : 264330429542
 Option 2 ID : 264330429544
 Option 3 ID : 264330429541
 Option 4 ID : 264330429543
 Status : Answered
 Chosen Option : 3

Q.42 Who inaugurated the 36th National Games, which were held in the year 2022?

- Ans
- 1. Narendra Modi
 - 2. Kiren Rijju
 - 3. Nisith Pramanik
 - 4. Anurag Thakur

Question ID : 264330113731
 Option 1 ID : 264330447011
 Option 2 ID : 264330447010
 Option 3 ID : 264330447012
 Option 4 ID : 264330447009
 Status : Answered
 Chosen Option : 4

Q.43 The Congress and the Muslim League signed the historic _____ in 1916.

- Ans
- 1. Lahore Pact
 - 2. Surat Pact
 - 3. Delhi Pact
 - 4. Lucknow Pact

Question ID : 264330114101
 Option 1 ID : 264330448490
 Option 2 ID : 264330448492
 Option 3 ID : 264330448489
 Option 4 ID : 264330448491
 Status : Answered
 Chosen Option : 4

Q.44 'My Country My life', is the autobiography of which of the following ex-Deputy Prime Minister of India?

- Ans
- 1. Vallabh Bhai Patel
 - 2. Jagjivan Ram
 - 3. Lal Krishna Advani
 - 4. Morarji Desai

Question ID : 264330112864
 Option 1 ID : 264330443542
 Option 2 ID : 264330443541
 Option 3 ID : 264330443544
 Option 4 ID : 264330443543
 Status : Answered
 Chosen Option : 4

Q.45 The value of final goods and services produced in a country is known as _____ .

- Ans
- 1. national income
 - 2. national productivity
 - 3. per capita income
 - 4. distribution of income

Question ID : 264330120877
 Option 1 ID : 264330473723
 Option 2 ID : 264330473724
 Option 3 ID : 264330473726
 Option 4 ID : 264330473725
 Status : Answered
 Chosen Option : 1

Q.46 How many openings does the digestive system in Platyhelminthes have?

- Ans
- 1. Single
 - 2. Indefinite
 - 3. Triple
 - 4. Double

Question ID : 264330113316
 Option 1 ID : 264330445349
 Option 2 ID : 264330445352
 Option 3 ID : 264330445351
 Option 4 ID : 264330445350
 Status : Answered
 Chosen Option : 4

Q.47 प्रारंभिक वैदिक समाज में, परिवार के मुखिया को किस नाम से जाना जाता था?

- Ans
- 1. ग्रामणी
 - 2. व्रजपति
 - 3. पुरोहित
 - 4. कुलपा

Question ID : 264330120417
 Option 1 ID : 264330471920
 Option 2 ID : 264330471921
 Option 3 ID : 264330471922
 Option 4 ID : 264330471919
 Status : Answered
 Chosen Option : 3

Q.48 Which physicist is known for extensive research in 'radiation phenomena' and the discovery of polonium and radium?

- Ans
- 1. Lise Meitner
 - 2. Rosalind Franklin
 - 3. Helen Quinn
 - 4. Marie Curie

Question ID : 264330141660
Option 1 ID : 264330554962
Option 2 ID : 264330554959
Option 3 ID : 264330554960
Option 4 ID : 264330554961
Status : Answered
Chosen Option : 2

Q.49 Which organisation releases the official poverty estimates in India based on data collected from the National Sample Survey Office (NSSO) and other sources?

- Ans
- 1. World Bank
 - 2. NITI Aayog
 - 3. Reserve Bank of India
 - 4. Ministry of Finance

Question ID : 264330183043
Option 1 ID : 264330717904
Option 2 ID : 264330717907
Option 3 ID : 264330717905
Option 4 ID : 264330717906
Status : Answered
Chosen Option : 2

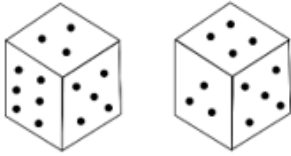
Q.50 Which of the following plans was introduced in the year 1945, before planned economic development began in India?

- Ans
- 1. The Gandhian Plan
 - 2. The People's Plan
 - 3. The Sarvodaya Plan
 - 4. The Bombay Plan

Question ID : 264330111750
Option 1 ID : 264330439086
Option 2 ID : 264330439087
Option 3 ID : 264330439088
Option 4 ID : 264330439085
Status : Answered
Chosen Option : 3

Section : Reasoning

Q.1 Observe the dots on a dice (one to six dots) in the following figures. How many dots are contained on the face opposite to that containing four dots?



- Ans
- 1. Two
 - 2. One
 - 3. Three
 - 4. Six

Question ID : 264330113646
 Option 1 ID : 264330446670
 Option 2 ID : 264330446669
 Option 3 ID : 264330446672
 Option 4 ID : 264330446671
 Status : Answered
 Chosen Option : 4

Q.2 Select the option that represents the letters that, when sequentially placed from left to right in the blanks below, will complete the letter series.

C _ E _ T _ W _ R T C W _ R _ C W E _ _

- Ans
- 1. WRCEETRT
 - 2. WRCERTRT
 - 3. WRCERERT
 - 4. WRCETERT

Question ID : 26433092542
 Option 1 ID : 264330363460
 Option 2 ID : 264330363459
 Option 3 ID : 264330363458
 Option 4 ID : 264330363457
 Status : Answered
 Chosen Option : 1

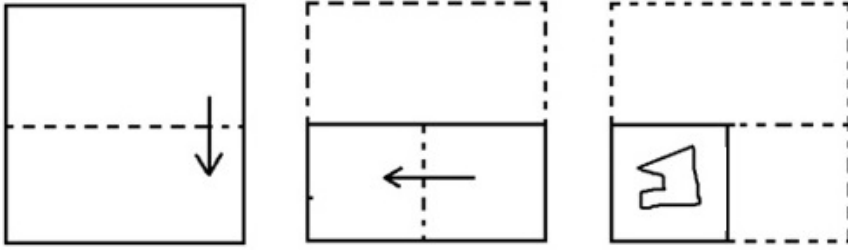
Q.3 Which two signs should be interchanged to make the following equation correct?

$$14 \times 2 \div 9 - 5 + 18 = 76$$

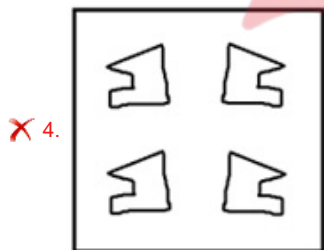
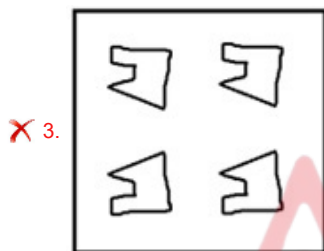
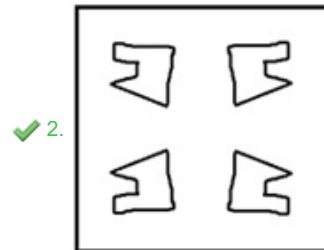
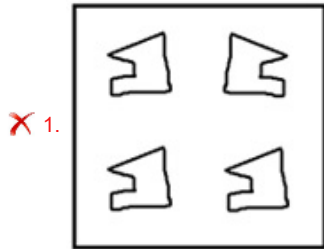
- Ans
- 1. + and ×
 - 2. + and +
 - 3. - and +
 - 4. - and ×

Question ID : 264330101089
 Option 1 ID : 264330396904
 Option 2 ID : 264330396901
 Option 3 ID : 264330396902
 Option 4 ID : 264330396903
 Status : Answered
 Chosen Option : 1

Q.4 The sequence of folding a piece of paper and the manner in which the folded paper has been cut is shown below. Choose a figure which would most closely resemble the unfolded form of the paper.



Ans



Question ID : 264330112318
 Option 1 ID : 264330441357
 Option 2 ID : 264330441359
 Option 3 ID : 264330441360
 Option 4 ID : 264330441358
 Status : Answered
 Chosen Option : 2

Q.5 Which figure should replace the question mark (?) if the following series were to be continued?

	3		C		P		3		A	
P	□	C	3	L	A	A	C	3	P	S
A		P		L		A		S		?

Ans

✗ 1.

		S
P	L	3
A		

✗ 2.

		P
S	♡	A
L		

✓ 3.

		P
A	♡	S
L		

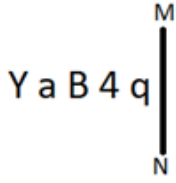
✗ 4.

		P
A	3	S
L		



Question ID : 264330103890
 Option 1 ID : 264330407862
 Option 2 ID : 264330407863
 Option 3 ID : 264330407864
 Option 4 ID : 264330407861
 Status : Answered
 Chosen Option : 3

Q.6 Select the correct mirror image of the given figure when the mirror is placed at MN as shown below.



- Ans
- 1. b 4 B a Y
 - 2. p 4 B 9 Y
 - 3. Y a B 4 q
 - 4. p 4 B 9 Y

Question ID : 264330166654
 Option 1 ID : 264330653655
 Option 2 ID : 264330653657
 Option 3 ID : 264330653658
 Option 4 ID : 264330653656
 Status : Answered
 Chosen Option : 4

Q.7 Six friends Farheen, Pooja, Richa, Sonika, Vani and Tanya are sitting around a circular table facing the centre. Farheen is an immediate neighbour of both Pooja and Richa. Sonika is sitting second to the right of Pooja. Vani is sitting third to the left of Richa. Tanya is an immediate neighbour of both Sonika and Richa. Who sits to the immediate left of Tanya?

- Ans
- 1. Richa
 - 2. Pooja
 - 3. Farheen
 - 4. Sonika

Question ID : 26433082283
 Option 1 ID : 264330322966
 Option 2 ID : 264330322968
 Option 3 ID : 264330322967
 Option 4 ID : 264330322965
 Status : Answered
 Chosen Option : 4

Q.8 Select the option that is related to the fourth number in the same way as the first number is related to the second number and the fifth number is related to the sixth number.

216 : 344 :: ? : 126 :: 27 : 65

- Ans
- 1. 68
 - 2. 66
 - 3. 70
 - 4. 64

Question ID : 26433051992
 Option 1 ID : 264330203270
 Option 2 ID : 264330203273
 Option 3 ID : 264330203271
 Option 4 ID : 264330203272
 Status : Answered
 Chosen Option : 4

Q.9 Select the set in which the numbers are related in the same way as are the numbers of the following sets.

(NOTE: Operations should be performed on the whole numbers, without breaking down the numbers into its constituent digits. E.g. 13 – Operations on 13 such as adding/subtracting/multiplying etc. to 13 can be performed. Breaking down 13 into 1 and 3 and then performing mathematical operations on 1 and 3 is not allowed)
(7, 16, 168)
(3, 28, 126)

- Ans 1. (9, 17, 153)
 2. (8, 7, 136)
 3. (11, 18, 396)
 4. (6, 11, 99)

Question ID : 26433087213
 Option 1 ID : 264330342492
 Option 2 ID : 264330342489
 Option 3 ID : 264330342491
 Option 4 ID : 264330342490
 Status : Answered
 Chosen Option : 4

Q.10 Which of the following options will replace the question mark (?) in the given series?
71, 213, 639, 1917, 5751, ?

- Ans 1. 19479
 2. 11643
 3. 17253
 4. 16509

Question ID : 264330109440
 Option 1 ID : 264330430040
 Option 2 ID : 264330430039
 Option 3 ID : 264330430037
 Option 4 ID : 264330430038
 Status : Answered
 Chosen Option : 3

Q.11 Select the correct combination of mathematical signs to sequentially replace the * signs and to balance the given equation.
 $8*1*4*2*16*2*8$

- Ans 1. = x + x + -
 2. + - - x x =
 3. x + x - + =
 4. ÷ x - + x =

Question ID : 26433085646
 Option 1 ID : 264330336286
 Option 2 ID : 264330336288
 Option 3 ID : 264330336287
 Option 4 ID : 264330336285
 Status : Answered
 Chosen Option : 3

Q.12 Read the given statements and conclusions carefully. Assuming that the information given in the statements is true, even if it appears to be at variance with commonly known facts, decide which of the given conclusions logically follow(s) from the statements.

Statements:

Some backpacks are bags.

All backpacks are luggage.

Conclusions:

I. Some luggage are bags.

II. Some luggage are backpacks.

- Ans
- 1. Neither conclusion I nor II follows
 - 2. Both conclusions I and II follow
 - 3. Only conclusion I follows
 - 4. Only conclusion II follows

Question ID : 26433069513

Option 1 ID : 264330272567

Option 2 ID : 264330272566

Option 3 ID : 264330272564

Option 4 ID : 264330272565

Status : Answered

Chosen Option : 2

Q.13 In a certain code language, 'ORBIT' is written as 'SHAQN' and 'PLANT' is written as 'SMZKO'. How will 'PLUTO' be written in that language?

- Ans
- 1. OKTSN
 - 2. NSTKO
 - 3. NSTKP
 - 4. SSTKQ

Question ID : 26433087171

Option 1 ID : 264330342324

Option 2 ID : 264330342322

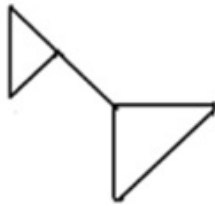
Option 3 ID : 264330342323

Option 4 ID : 264330342321

Status : Answered

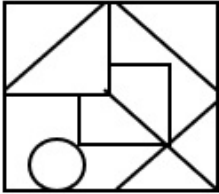
Chosen Option : 2

Q.14 The given figure is followed by four option figures. Select the option figure in which this figure is embedded (i.e., contains this figure in the same form; rotation is NOT allowed).

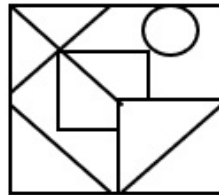


Ans

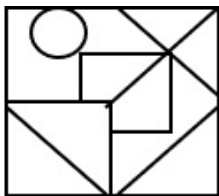
✗ 1.



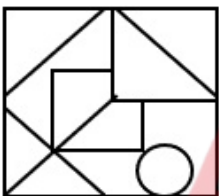
✓ 2.



✗ 3.



✗ 4.



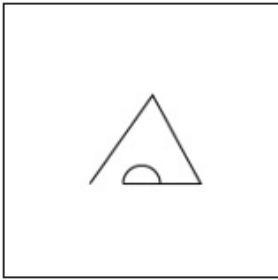
Question ID : 264330121619
 Option 1 ID : 264330476650
 Option 2 ID : 264330476649
 Option 3 ID : 264330476647
 Option 4 ID : 264330476648
 Status : Answered
 Chosen Option : 2

Q.15 Select the option that is related to the fifth letter-cluster in the same way as the second letter-cluster is related to the first letter-cluster and the fourth letter-cluster is related to the third letter-cluster.
 BOAT : XESF :: MANY : CREQ :: TIME : ?

- Ans
- ✗ 1. JQMW
 - ✗ 2. JQMX
 - ✓ 3. IQMX
 - ✗ 4. IQNY

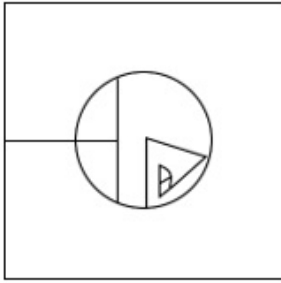
Question ID : 26433076461
 Option 1 ID : 264330299911
 Option 2 ID : 264330299908
 Option 3 ID : 264330299910
 Option 4 ID : 264330299909
 Status : Answered
 Chosen Option : 3

Q.16 Choose the option figure in which the problem figure is hidden/embedded. (Rotation is not allowed)

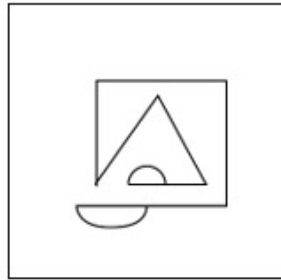


Ans

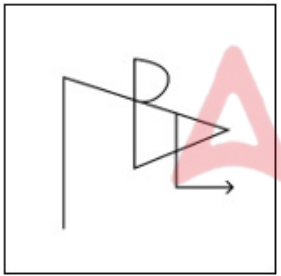
✗ 1.



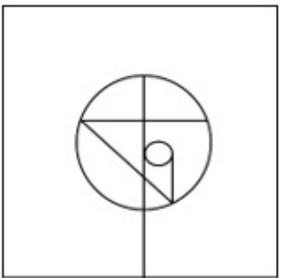
✓ 2.



✗ 3.

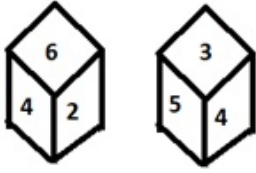


✗ 4.



Question ID : 264330121466
 Option 1 ID : 264330476048
 Option 2 ID : 264330476049
 Option 3 ID : 264330476050
 Option 4 ID : 264330476047
 Status : Answered
 Chosen Option : 2

Q.17 Six numbers 1, 2, 3, 4, 5 and 6 are written on different faces of a dice. Two positions of this dice are shown in the figure. Find the number on the face opposite to 5.



- Ans
- 1. 2
 - 2. 3
 - 3. 1
 - 4. 6

Question ID : 264330117895
 Option 1 ID : 264330463395
 Option 2 ID : 264330463396
 Option 3 ID : 264330463397
 Option 4 ID : 264330463398
 Status : Answered
 Chosen Option : 4

Q.18 Select the correct mirror image of the given figure when the mirror is placed at PQ as shown below.



- Ans
- 1. e p 2 K 7
 - 2. e p 2 K 7
 - 3. e p 2 K 7
 - 4. e p 2 K 7

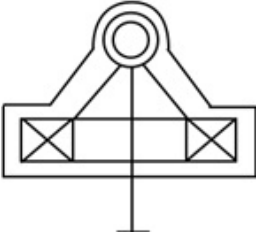
Question ID : 26433080774
 Option 1 ID : 264330317032
 Option 2 ID : 264330317031
 Option 3 ID : 264330317030
 Option 4 ID : 264330317029
 Status : Answered
 Chosen Option : 1

Q.19 Select the option in which the given figure is embedded (rotation is NOT allowed).

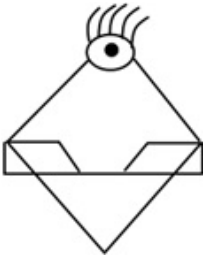


Ans

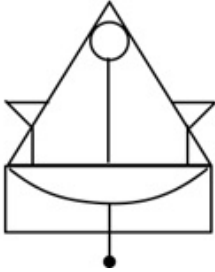
X 1.



X 2.



✓ 3.



X 4.



Question ID : 264330111668

Option 1 ID : 264330438757

Option 2 ID : 264330438759


Option 3 ID : 264330438758

Option 4 ID : 264330438760

Status : Answered

Chosen Option : 3

Q.20 Select the correct mirror image of the given figure when the mirror is placed at PQ as shown below.



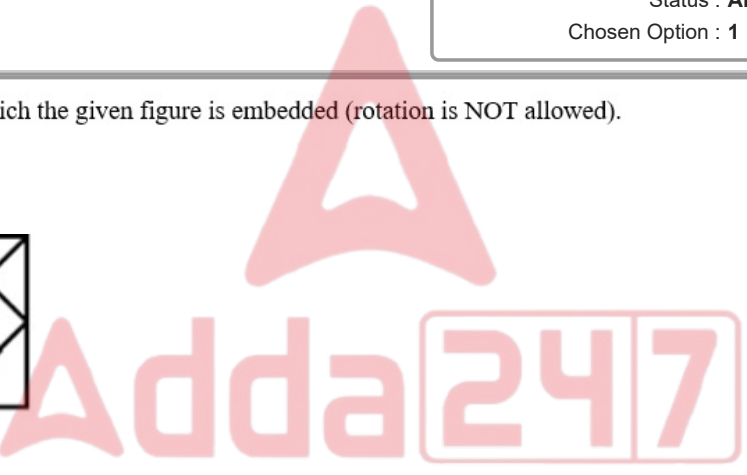
- Ans
- ✓ 1. 2 A 7 9 F t G
 - ✗ 2. 2 A 7 9 F t G
 - ✗ 3. 2 7 A 9 F t G
 - ✗ 4. 2 A 7 9 F t G

Question ID : 26433080777
 Option 1 ID : 264330317041
 Option 2 ID : 264330317042
 Option 3 ID : 264330317043
 Option 4 ID : 264330317044
 Status : Answered
 Chosen Option : 1

Q.21 Select the option in which the given figure is embedded (rotation is NOT allowed).



- Ans
- ✗ 1.
 - ✓ 2.
 - ✗ 3.
 - ✗ 4.



Question ID : 264330101155
 Option 1 ID : 264330397166
 Option 2 ID : 264330397168
 Option 3 ID : 264330397165
 Option 4 ID : 264330397167
 Status : Answered
 Chosen Option : 2

Q.22 Select the correct mirror image of the given figure when the mirror is placed at PQ as shown below.

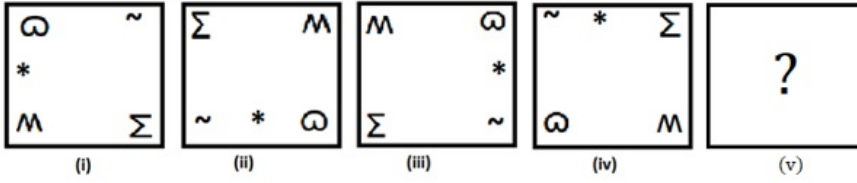
EFEH@!\$%^2 

Ans

- 1. $\zeta^{\wedge}\%!\textcircled{\text{a}}!\$H\text{E}\text{F}\text{E}\text{E}$
- 2. $\text{E}\text{F}\text{E}\text{H}\text{!}\textcircled{\text{a}}!\$H\text{E}\text{F}\text{E}\text{E}$
- 3. $\zeta^{\wedge}\%!\$!\textcircled{\text{a}}H\text{E}\text{F}\text{E}\text{E}$
- 4. $\text{E}\text{E}\text{F}\text{H}\textcircled{\text{a}}!\$!\zeta^{\wedge}$

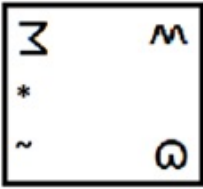
Question ID : 26433082023
 Option 1 ID : 264330321925
 Option 2 ID : 264330321928
 Option 3 ID : 264330321926
 Option 4 ID : 264330321927
 Status : Answered
 Chosen Option : 3

Q.23 Select the figure from among the given options that can replace the question mark (?) in the following series.

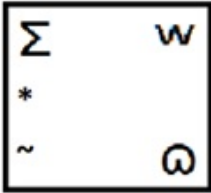


Ans

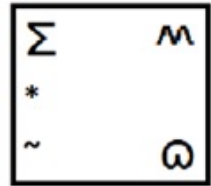
X 1.



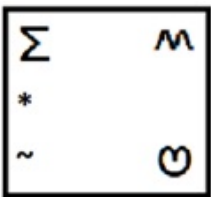
X 2.



✓ 3.



X 4.



Question ID : 264330106550

Option 1 ID : 264330418502

Option 2 ID : 264330418503

Option 3 ID : 264330418501

Option 4 ID : 264330418504

Status : Answered

Chosen Option : 3

Q.24 Select the figure that will replace the question mark (?) in the following figure series.




Ans

- 1.
- 2.
- 3.
- 4.

Question ID : 264330108954
 Option 1 ID : 264330428093
 Option 2 ID : 264330428094
 Option 3 ID : 264330428096
 Option 4 ID : 264330428095
 Status : Answered
 Chosen Option : 4

Q.25 How many squares are there in the given figure?



- Ans
- 1. 36
 - 2. 40
 - 3. 32
 - 4. 30

Question ID : 26433095001
 Option 1 ID : 264330372826
 Option 2 ID : 264330372828
 Option 3 ID : 264330372827
 Option 4 ID : 264330372825
 Status : Answered
 Chosen Option : 3

Q.1 Simplify the following.

$$\frac{6}{7} + \frac{2}{3}$$

$$\frac{1}{6} - \frac{3}{20}$$

- Ans
- ✓ 1. $\frac{640}{7}$
 - ✗ 2. $\frac{80}{7}$
 - ✗ 3. $\frac{16}{630}$
 - ✗ 4. $\frac{640}{133}$

Question ID : 264330104228
 Option 1 ID : 264330409216
 Option 2 ID : 264330409213
 Option 3 ID : 264330409214
 Option 4 ID : 264330409215
 Status : Answered
 Chosen Option : 1

Q.2 In an election between R and S, R wins the election with $\frac{1}{4}$ votes of the votes polled in favour of S. There are no invalid votes. What percentage (rounded off to 2 decimal places) of total votes are voted in favour of R?

- Ans
- ✓ 1. 55.56%
 - ✗ 2. 52.56%
 - ✗ 3. 60.56%
 - ✗ 4. 57.56%

Question ID : 264330130168
 Option 1 ID : 264330509786
 Option 2 ID : 264330509783
 Option 3 ID : 264330509784
 Option 4 ID : 264330509785
 Status : Answered
 Chosen Option : 1

Q.3 There are four prime numbers written in ascending order. The product of the first three is 30 and that of the last three is 165. Find the last number.

- Ans
- ✓ 1. 11
 - ✗ 2. 7
 - ✗ 3. 17
 - ✗ 4. 13

Question ID : 264330111445
 Option 1 ID : 264330437865
 Option 2 ID : 264330437866
 Option 3 ID : 264330437868
 Option 4 ID : 264330437867
 Status : Answered
 Chosen Option : 1

Q.4 The cost of an item increased to ₹250 from ₹225. What is the percentage increase in the cost?

- Ans 1. 11.11%
 2. 13.33%
 3. 9.5%
 4. 16.66%

Question ID : 264330126099
 Option 1 ID : 264330494071
 Option 2 ID : 264330494069
 Option 3 ID : 264330494070
 Option 4 ID : 264330494068
 Status : Answered
 Chosen Option : 1

Q.5 A shopkeeper gives a discount of 10% on the marked price. If the selling price is ₹6,750, then find the discount.

- Ans 1. ₹750
 2. ₹700
 3. ₹650
 4. ₹800

Question ID : 264330111464
 Option 1 ID : 264330437942
 Option 2 ID : 264330437943
 Option 3 ID : 264330437941
 Option 4 ID : 264330437944
 Status : Answered
 Chosen Option : 1

Q.6 A can complete a work in 16 days and B can complete the same work in 26 days. What will be the number of days required by A and B to complete the same work together?

- Ans 1. $11\frac{20}{21}$
 2. $7\frac{8}{21}$
 3. $9\frac{19}{21}$
 4. $8\frac{11}{21}$

Question ID : 264330104534
 Option 1 ID : 264330410440
 Option 2 ID : 264330410438
 Option 3 ID : 264330410439
 Option 4 ID : 264330410437
 Status : Answered
 Chosen Option : 3

Q.7 If the average of 10 numbers is 625 and the average of 25 numbers is 100, then the average of 35 numbers is equal to _____.

- Ans
- 1. 362.5
 - 2. 66.5
 - 3. 315
 - 4. 250

Question ID : 264330168960
Option 1 ID : 264330662646
Option 2 ID : 264330662644
Option 3 ID : 264330662643
Option 4 ID : 264330662645
Status : Answered
Chosen Option : 4

Q.8 A certain sum amounts to ₹1,725 in 3 years and ₹1,875 in 5 years on simple interest. The interest rate per annum is:

- Ans
- 1. 6%
 - 2. 5%
 - 3. 4%
 - 4. 7%

Question ID : 264330182528
Option 1 ID : 264330715905
Option 2 ID : 264330715904
Option 3 ID : 264330715903
Option 4 ID : 264330715906
Status : Answered
Chosen Option : 2

Q.9 The compound amount of a certain sum of money in 2 years and 3 years becomes ₹12,260 and ₹12,873, respectively. Find the rate of interest.

- Ans
- 1. 7%
 - 2. 6%
 - 3. 5%
 - 4. 4%

Question ID : 264330106007
Option 1 ID : 264330416332
Option 2 ID : 264330416331
Option 3 ID : 264330416330
Option 4 ID : 264330416329
Status : Answered
Chosen Option : 1

Q.10 A football can occupy $36\pi \text{ cm}^3$ of air. Its radius (in cm) will be:

- Ans
- 1. 1.5
 - 2. 2
 - 3. 4
 - 4. 3

Question ID : 26433091574
 Option 1 ID : 264330359664
 Option 2 ID : 264330359661
 Option 3 ID : 264330359663
 Option 4 ID : 264330359662
 Status : Answered
 Chosen Option : 4

Q.11 Two stations, A and B are 100 km apart on a straight line. One train starts from A at 7 A.M. and travels towards B at a speed of 20 km/h. Another train starts from B at 8 A.M. and travels towards A at a speed of 25 km/h. At what time they will meet?

- Ans
- 1. 10.47 A.M.
 - 2. 11.05 A.M.
 - 3. 10.37 A.M.
 - 4. 9.47 A.M.

Question ID : 264330183864
 Option 1 ID : 264330721132
 Option 2 ID : 264330721133
 Option 3 ID : 264330721134
 Option 4 ID : 264330721135
 Status : Answered
 Chosen Option : 1

Q.12 Find the area of triangle whose sides are 6 cm, 8 cm and 10 cm long.

- Ans
- 1. 12 cm^2
 - 2. 24 cm^2
 - 3. 20 cm^2
 - 4. 28 cm^2

Question ID : 264330111486
 Option 1 ID : 264330438029
 Option 2 ID : 264330438031
 Option 3 ID : 264330438030
 Option 4 ID : 264330438032
 Status : Answered
 Chosen Option : 2

Q.13 Which of the following is the largest ratio?

- Ans
- 1. 3 : 5
 - 2. 6 : 5
 - 3. 4 : 5
 - 4. 7 : 10

Question ID : 264330119198
 Option 1 ID : 264330467079
 Option 2 ID : 264330467080
 Option 3 ID : 264330467082
 Option 4 ID : 264330467081
 Status : Answered
 Chosen Option : 1

Q.14 A shopkeeper sells two articles at a ₹840 each. He earns a 20% profit on the first article and incurs a 20% loss on the second article. Determine the percentage of net profit or loss he incurs.

- Ans
- 1. Profit of 5%
 - 2. Loss of 5%
 - 3. Loss of 4%
 - 4. Loss of 3%

Question ID : 264330174055
Option 1 ID : 264330682673
Option 2 ID : 264330682674
Option 3 ID : 264330682672
Option 4 ID : 264330682671
Status : Answered
Chosen Option : 3

Q.15 If the product of two co-prime numbers is 306, then the LCM of the numbers is:

- Ans
- 1. 306
 - 2. 153
 - 3. 18
 - 4. 17

Question ID : 264330111451
Option 1 ID : 264330437889
Option 2 ID : 264330437890
Option 3 ID : 264330437892
Option 4 ID : 264330437891
Status : Answered
Chosen Option : 1

Section : Computer Proficiency

Q.1 Which of the following is a commonly used word processing package?

- Ans
- 1. Microsoft Word
 - 2. Microsoft Excel
 - 3. Google Chrome
 - 4. Adobe Photoshop

Question ID : 264330174501
Option 1 ID : 264330684426
Option 2 ID : 264330684424
Option 3 ID : 264330684425
Option 4 ID : 264330684423
Status : Not Answered
Chosen Option : --

Q.2 In MS Excel 365, in which of the following Ribbon tabs does the add rows option reside in MS Excel 365?

- Ans
- 1. Home → Insert
 - 2. Home → File
 - 3. Home → Edit
 - 4. Home → Format

Question ID : 264330182769
 Option 1 ID : 264330716848
 Option 2 ID : 264330716850
 Option 3 ID : 264330716849
 Option 4 ID : 264330716847
 Status : Not Answered
 Chosen Option : --

Q.3 Which of the following CANNOT be the default font size in the font-menu dropdown list in MS Word 365 in Windows 10?

- Ans
- 1. 10
 - 2. 11
 - 3. 9
 - 4. 13

Question ID : 264330180641
 Option 1 ID : 264330708532
 Option 2 ID : 264330708533
 Option 3 ID : 264330708531
 Option 4 ID : 264330708534
 Status : Not Answered
 Chosen Option : --

Q.4 Which technology is commonly used for sending and receiving electronic mail?

- Ans
- 1. Telephony
 - 2. Postal services
 - 3. Fax machines
 - 4. Internet and email protocols

Question ID : 264330173547
 Option 1 ID : 264330680667
 Option 2 ID : 264330680669
 Option 3 ID : 264330680668
 Option 4 ID : 264330680670
 Status : Answered
 Chosen Option : 4

Q.5 In MS Excel 365, which of the following is the shortcut key in MS Excel to print a spread sheet?

- Ans
- 1. Alt + I
 - 2. Ctrl + I
 - 3. Ctrl + P
 - 4. Alt + P

Question ID : 264330180401
 Option 1 ID : 264330707573
 Option 2 ID : 264330707574
 Option 3 ID : 264330707572
 Option 4 ID : 264330707571
 Status : Answered
 Chosen Option : 3

Q.6 Which of the following is/are parts of the standard Structure of Electronic mail?

- Ans 1. Both Header and Body
 2. Only Body
 3. Neither Header nor Body
 4. Only Header

Question ID : 264330176708
 Option 1 ID : 264330693049
 Option 2 ID : 264330693048
 Option 3 ID : 264330693050
 Option 4 ID : 264330693047
 Status : Not Answered
 Chosen Option : --

Q.7 The group of buttons or icons below the menu bar in a word processing software are called:

- Ans 1. status bars
 2. dialog boxes
 3. toolbars
 4. menus

Question ID : 264330178584
 Option 1 ID : 264330700366
 Option 2 ID : 264330700365
 Option 3 ID : 264330700363
 Option 4 ID : 264330700364
 Status : Answered
 Chosen Option : 3

Q.8 What is the full form of NetBIOS?

- Ans 1. Network Basic Input / Output System
 2. Network Based Input / Output System
 3. Networking Binary Input / Output System
 4. Net Binary In / Out System

Question ID : 264330171381
 Option 1 ID : 264330672140
 Option 2 ID : 264330672142
 Option 3 ID : 264330672139
 Option 4 ID : 264330672141
 Status : Answered
 Chosen Option : 2

Q.9 In MS Excel 365, Which of the following shortcut keys is used to save a workbook in MS Excel?

- Ans 1. F6
 2. Ctrl+A
 3. Ctrl+S
 4. F1

Question ID : 264330178595
 Option 1 ID : 264330700408
 Option 2 ID : 264330700407
 Option 3 ID : 264330700409
 Option 4 ID : 264330700410
 Status : Answered
 Chosen Option : 3

Q.10 Which of the following is the correct shortcut key used to increase paragraph indentation in MS Word 365?

- Ans
- 1. Ctrl + L
 - 2. Ctrl + Tab
 - 3. Ctrl + M
 - 4. Ctrl + I

Question ID : 264330176703

Option 1 ID : 264330693030

Option 2 ID : 264330693029

Option 3 ID : 264330693027

Option 4 ID : 264330693028

Status : Answered

Chosen Option : 2

