

**Delhi Police
Constable (Exe)**

**Previous Year Paper
15 Nov, 2023 Shift 2**



Test Prime

ALL EXAMS,
ONE SUBSCRIPTION



70,000+
Mock Tests



Personalised
Report Card



Unlimited
Re-Attempt



600+
Exam Covered



Previous Year
Papers



500%
Refund



ATTEMPT FREE MOCK NOW

Constable Executive Male and Female in Delhi Police Examination 2023

Roll Number	
Candidate Name	
Venue Name	
Exam Date	15/11/2023
Exam Time	12:00 PM - 1:30 PM
Subject	Constable Executive Male and Female in Delhi Police Examination 2023

Section : **General Knowledge****Q.1 Which of the following State Governments organises Surajkund Mela every year?**

- Ans 1. Jammu
 2. Haryana
 3. Punjab
 4. Jharkhand

Question ID : 264330106206
Option 1 ID : 264330417126
Option 2 ID : 264330417127
Option 3 ID : 264330417125
Option 4 ID : 264330417128
Status : Answered
Chosen Option : 2

Q.2 The Wazir (minister) of _____ built Moth ki Masjid in Delhi.

- Ans 1. Alauddin Khalji
 2. Khizr Khan
 3. Sikandar Lodi
 4. Firuz Shah Tughluq

Question ID : 264330114076
Option 1 ID : 264330448391
Option 2 ID : 264330448389
Option 3 ID : 264330448390
Option 4 ID : 264330448392
Status : Answered
Chosen Option : 4

Q.3 Which is the most common tidal pattern?

- Ans 1. Mixed tides
 2. Diurnal tides
 3. Spring tides
 4. Semi-diurnal tides

Question ID : 264330116383
Option 1 ID : 264330457619
Option 2 ID : 264330457617
Option 3 ID : 264330457620
Option 4 ID : 264330457618
Status : Answered
Chosen Option : 3

Q.4 Which of the following dance forms belongs to the Vaishnava Monasteries of North East India?

- Ans
- 1. Odissi
 - 2. Mohiniattam
 - 3. Kuchipudi
 - 4. Sattriya

Question ID : 264330106181
Option 1 ID : 264330417028
Option 2 ID : 264330417027
Option 3 ID : 264330417025
Option 4 ID : 264330417026
Status : Answered
Chosen Option : 1

Q.5 How many tiers of government are mentioned in the Constitution of India?

- Ans
- 1. Two
 - 2. Four
 - 3. Three
 - 4. Five

Question ID : 264330133039
Option 1 ID : 264330521209
Option 2 ID : 264330521207
Option 3 ID : 264330521208
Option 4 ID : 264330521210
Status : Answered
Chosen Option : 1

Q.6 When did the Paris Agreement on Climate Change come into force (become effective from)?

- Ans
- 1. 22nd April 2016
 - 2. 4th November 2016
 - 3. 27th January 2017
 - 4. 12th December 2015

Question ID : 264330137310
Option 1 ID : 264330537868
Option 2 ID : 264330537869
Option 3 ID : 264330537870
Option 4 ID : 264330537867
Status : Not Answered
Chosen Option : --

Q.7 Who among the following is associated with the Mridangam instrument?

- Ans
- 1. Zarin S Sharma
 - 2. Hari Prasad Chaurasia
 - 3. Palghat Mani Iyer
 - 4. Ali Akbar Khan

Question ID : 264330111947
Option 1 ID : 264330439873
Option 2 ID : 264330439875
Option 3 ID : 264330439876
Option 4 ID : 264330439874
Status : Answered
Chosen Option : 4

Q.8 According to Census 2011, which group of states have the highest males literacy rates?

- Ans
- 1. Rajasthan and Bihar
 - 2. Kerala and Tamil Nadu
 - 3. Kerala and Mizoram
 - 4. Sikkim and Nagaland

Question ID : 264330119912
Option 1 ID : 264330469923
Option 2 ID : 264330469926
Option 3 ID : 264330469925
Option 4 ID : 264330469924
Status : Answered
Chosen Option : 3

Q.9 According to Census 2011, what was the population density of India?

- Ans
- 1. 382 persons
 - 2. 343 persons
 - 3. 372 persons
 - 4. 362 persons

Question ID : 264330138074
Option 1 ID : 264330540903
Option 2 ID : 264330540906
Option 3 ID : 264330540904
Option 4 ID : 264330540905
Status : Answered
Chosen Option : 1

Q.10 Which of the following statements is correct?

- a) The Indian desert lies towards the eastern margins of the Aravali Hills. It is an undulating sandy plain covered with sand dunes.
b) This region has arid climate with low vegetation cover and streams appear during the rainy season.

- Ans
- 1. Only a is correct.
 - 2. Both a and b are correct.
 - 3. Only b is correct.
 - 4. Both a and b are incorrect.

Question ID : 264330178101
Option 1 ID : 264330698467
Option 2 ID : 264330698469
Option 3 ID : 264330698468
Option 4 ID : 264330698470
Status : Answered
Chosen Option : 2

Q.11 Who among the following was the first person in British India to get the scholarship of Indian Society of Oriental Arts, established in 1906?

- Ans
- 1. Jagdish Chandra Bose
 - 2. Subrahmanyam Chandrasekhar
 - 3. Nandalal Bose
 - 4. Prafulla Chandra Roy

Question ID : 264330120264
Option 1 ID : 264330471313
Option 2 ID : 264330471311
Option 3 ID : 264330471312
Option 4 ID : 264330471314
Status : Answered
Chosen Option : 4

Q.12 Which state has two headquarters of Indian Railway Zones?

- Ans
- 1. Rajasthan
 - 2. Uttar Pradesh
 - 3. Bihar
 - 4. Assam

Question ID : 264330182904
Option 1 ID : 264330717360
Option 2 ID : 264330717361
Option 3 ID : 264330717362
Option 4 ID : 264330717363
Status : Answered
Chosen Option : 2

Q.13 Untouchability is against which of the following fundamental rights?

- Ans
- 1. Right to freedom of religion
 - 2. Right to constitutional remedy
 - 3. Right to liberty
 - 4. Right to equality

Question ID : 264330109838
Option 1 ID : 264330431631
Option 2 ID : 264330431632
Option 3 ID : 264330431630
Option 4 ID : 264330431629
Status : Answered
Chosen Option : 4

Q.14 Elections under which act gave the control of seven provinces in 1937 to the Congress?

- Ans
- 1. Government of India Act, 1935
 - 2. Government of India Act, 1937
 - 3. Provincial Act, 1935
 - 4. Municipalities Act, 1935

Question ID : 264330120148
Option 1 ID : 264330470847
Option 2 ID : 264330470850
Option 3 ID : 264330470849
Option 4 ID : 264330470848
Status : Answered
Chosen Option : 3

Q.15 Turmeric powder is adulterated with:

- Ans 1. lead chromate
 2. zinc carbonate
 3. silicon oxide
 4. magnesium chloride

Question ID : 264330120973
Option 1 ID : 264330474109
Option 2 ID : 264330474108
Option 3 ID : 264330474107
Option 4 ID : 264330474110
Status : Answered
Chosen Option : 4

Q.16 In which king's honour and praise was the Prayag Prashasti written by the Sanskrit poet Harisena?

- Ans 1. Vikramaditya
 2. Chandragupta
 3. Samudragupta
 4. Ashoka

Question ID : 264330118958
Option 1 ID : 264330466490
Option 2 ID : 264330466487
Option 3 ID : 264330466489
Option 4 ID : 264330466488
Status : Answered
Chosen Option : 3

Q.17 When was the Bengal Partition Plan implemented?

- Ans 1. 10 September 1910
 2. 16 October 1905
 3. 7 August 1899
 4. 15 August 1915

Question ID : 264330114043
Option 1 ID : 264330448259
Option 2 ID : 264330448258
Option 3 ID : 264330448257
Option 4 ID : 264330448260
Status : Answered
Chosen Option : 2

Q.18 Gram Nyayalaya Act was enacted in the year _____.

- Ans 1. 2006
 2. 2008
 3. 2000
 4. 2004

Question ID : 264330120179
Option 1 ID : 264330470973
Option 2 ID : 264330470974
Option 3 ID : 264330470971
Option 4 ID : 264330470972
Status : Not Answered
Chosen Option : --

Q.19 Who became the first Indian woman to win two Olympic medals?

- Ans
- 1. Karnam Malleswari
 - 2. PV Sindhu
 - 3. Saina Nehwal
 - 4. Mary Kom

Question ID : 264330119262
Option 1 ID : 264330467338
Option 2 ID : 264330467336
Option 3 ID : 264330467335
Option 4 ID : 264330467337
Status : Answered
Chosen Option : 2

Q.20 The three-second rule is applicable for the game of _____.

- Ans
- 1. kho-kho
 - 2. badminton
 - 3. basketball
 - 4. kabaddi

Question ID : 264330110390
Option 1 ID : 264330433838
Option 2 ID : 264330433840
Option 3 ID : 264330433839
Option 4 ID : 264330433837
Status : Answered
Chosen Option : 1

Q.21 Which of the following is a merit of the parliamentary system?

- Ans
- 1. Autocracy
 - 2. Narrow representation
 - 3. Non responsible government
 - 4. Harmony between legislature and executive

Question ID : 264330177768
Option 1 ID : 264330697182
Option 2 ID : 264330697181
Option 3 ID : 264330697179
Option 4 ID : 264330697180
Status : Answered
Chosen Option : 4

Q.22 'Godaan', a famous novel, was authored by _____.

- Ans
- 1. Jaishankar Prasad
 - 2. Harivansh Rai Bachchan
 - 3. Suryakant Tripathi Nirala
 - 4. Munshi Premchand

Question ID : 26433064230
Option 1 ID : 264330251512
Option 2 ID : 264330251515
Option 3 ID : 264330251514
Option 4 ID : 264330251513
Status : Answered
Chosen Option : 4

Q.23 Expenditure incurred by residents during their foreign tour will be added to which component while calculating national income?

- Ans
- 1. Government final consumption expenditure
 - 2. Private final consumption expenditure
 - 3. Gross foreign capital formation
 - 4. Gross domestic capital formation

Question ID : 264330116514
Option 1 ID : 264330458141
Option 2 ID : 264330458143
Option 3 ID : 264330458144
Option 4 ID : 264330458142
Status : Answered
Chosen Option : 2

Q.24 FIH Asia Cup Men's Hockey 2022 was hosted by:

- Ans
- 1. Japan
 - 2. Pakistan
 - 3. Indonesia
 - 4. India

Question ID : 264330118896
Option 1 ID : 264330466242
Option 2 ID : 264330466241
Option 3 ID : 264330466240
Option 4 ID : 264330466239
Status : Answered
Chosen Option : 4

Q.25 Who was India's 12th Prime Minister?

- Ans
- 1. Inder Kumar Gujral
 - 2. Atal Bihari Vajpayee
 - 3. PV Narasimha Rao
 - 4. Manmohan Singh

Question ID : 264330110817
Option 1 ID : 264330435545
Option 2 ID : 264330435546
Option 3 ID : 264330435547
Option 4 ID : 264330435548
Status : Answered
Chosen Option : 1

Q.26 Name the Indian social reformer who played a crucial role in the passing of the Age of Consent Bill, 1891.

- Ans
- 1. Rabindranath Tagore
 - 2. C Subramania Bharathi
 - 3. Behramji Malabari
 - 4. Ishwarchandra Vidyasagar

Question ID : 264330114115
Option 1 ID : 264330448546
Option 2 ID : 264330448548
Option 3 ID : 264330448547
Option 4 ID : 264330448545
Status : Not Answered
Chosen Option : --

Q.27 'Why I am an Atheist' is an autobiography of whom among the following Revolutionaries?

- Ans
- 1. Chandrashekhar Azad
 - 2. Suryakant Sen
 - 3. Ramprasad Bismil
 - 4. Bhagat Singh

Question ID : 26433064212
Option 1 ID : 264330251440
Option 2 ID : 264330251441
Option 3 ID : 264330251443
Option 4 ID : 264330251442
Status : Answered
Chosen Option : 4

Q.28 Who among the following was the captain of the Indian cricket team in the 1983 World Cup?

- Ans
- 1. Kapil Dev
 - 2. Mohinder Amarnath
 - 3. Dilip Vengsarkar
 - 4. Sunil Gavaskar

Question ID : 264330176921
Option 1 ID : 264330693880
Option 2 ID : 264330693882
Option 3 ID : 264330693879
Option 4 ID : 264330693881
Status : Answered
Chosen Option : 1

Q.29 Identify the artist who is NOT related to the musical instrument pakhwaj.

- Ans
- 1. Pandit Kishan Maharaj
 - 2. Ayodhya Prasad
 - 3. Gopal Das
 - 4. Totaram Sharma

Question ID : 264330111193
Option 1 ID : 264330436860
Option 2 ID : 264330436858
Option 3 ID : 264330436859
Option 4 ID : 264330436857
Status : Answered
Chosen Option : 1

Q.30 Which of the following temples is located in Uttarakhand?

- Ans
- 1. Neelkanth Mahadev
 - 2. Ranakpur
 - 3. Gomateshwara
 - 4. Kamakhya

Question ID : 264330111850
Option 1 ID : 264330439486
Option 2 ID : 264330439487
Option 3 ID : 264330439488
Option 4 ID : 264330439485
Status : Answered
Chosen Option : 1

Q.31 Sonal Mansingh is an eminent Indian classical dancer and a leading exponent of Bharatanatyam, Kuchipudi, Odissi and _____ .

- Ans
- 1. Sattriya
 - 2. Kathakali
 - 3. Chhau
 - 4. Kathak

Question ID : 264330106198
Option 1 ID : 264330417096
Option 2 ID : 264330417095
Option 3 ID : 264330417094
Option 4 ID : 264330417093
Status : Answered
Chosen Option : 2

Q.32 By which name was the Head of the Panchayat or the Village Headman called in Mughal India?

- Ans
- 1. Samant
 - 2. Mahant
 - 3. Muqaddam
 - 4. Khoran

Question ID : 264330118989
Option 1 ID : 264330466613
Option 2 ID : 264330466614
Option 3 ID : 264330466612
Option 4 ID : 264330466611
Status : Answered
Chosen Option : 1

Q.33 Sodium hydrogen carbonate is called:

- Ans
- 1. Washing soda
 - 2. Baking soda
 - 3. Gypsum
 - 4. Plaster of Paris

Question ID : 264330177337
Option 1 ID : 264330695539
Option 2 ID : 264330695540
Option 3 ID : 264330695542
Option 4 ID : 264330695541
Status : Answered
Chosen Option : 1

Q.34 According to the Ministry of Commerce and Industry 2021-22, which of the following is the largest exported agricultural product from India?

- Ans
- 1. Rice
 - 2. Maize
 - 3. Spices
 - 4. Wheat

Question ID : 264330138066
Option 1 ID : 264330540873
Option 2 ID : 264330540871
Option 3 ID : 264330540874
Option 4 ID : 264330540872
Status : Answered
Chosen Option : 1

Q.35 Milk is good source of:

- Ans
- 1. phosphorous, iron, and protein
 - 2. calcium, magnesium, and fibre
 - 3. calcium, iron, and fibre
 - 4. calcium, phosphorous, and protein

Question ID : 264330120970
Option 1 ID : 264330474097
Option 2 ID : 264330474098
Option 3 ID : 264330474096
Option 4 ID : 264330474095
Status : Answered
Chosen Option : 3

Q.36 Which of the following Ministries introduced the Venture Capital Assistance Scheme?

- Ans
- 1. Ministry of Science and Technology
 - 2. Ministry of Micro, Small and Medium Enterprises
 - 3. Ministry of Agriculture and Farmers Welfare
 - 4. Ministry of Finance

Question ID : 264330116547
Option 1 ID : 264330458275
Option 2 ID : 264330458276
Option 3 ID : 264330458273
Option 4 ID : 264330458274
Status : Not Answered
Chosen Option : --

Q.37 Which form of art is celebrated at the Mando festival of Goa?

- Ans
- 1. Painting
 - 2. Literature
 - 3. Sports
 - 4. Music

Question ID : 264330132421
Option 1 ID : 264330518781
Option 2 ID : 264330518782
Option 3 ID : 264330518780
Option 4 ID : 264330518779
Status : Answered
Chosen Option : 4

Q.38 Economic reform measures in India were formally introduced in _____.

- Ans
- 1. 1990
 - 2. 1991
 - 3. 1980
 - 4. 1947

Question ID : 264330110021
Option 1 ID : 264330432364
Option 2 ID : 264330432361
Option 3 ID : 264330432363
Option 4 ID : 264330432362
Status : Answered
Chosen Option : 2

Q.39 Which of the following statements is correct about India for the period between 1950 and 1990?

- Ans**
- 1. The proportion of GDP contributed by agriculture and population engaged in the sector declined significantly.
 - 2. The proportion of GDP contributed by agriculture declined significantly but not the population engaged in the sector.
 - 3. Being an agricultural economy, the contribution of agricultural sector is not considerable for Indian economy
 - 4. The proportion of GDP contributed by agriculture increased significantly but not the population engaged in the sector.

Question ID : 264330120896

Option 1 ID : 264330473801

Option 2 ID : 264330473800

Option 3 ID : 264330473802

Option 4 ID : 264330473799

Status : Answered

Chosen Option : 2

Q.40 Which of the following Constitutional Amendment Acts added Fundamental Duties in the Indian Constitution?

- Ans**
- 1. 65th
 - 2. 74th
 - 3. 73rd
 - 4. 42nd

Question ID : 264330173482

Option 1 ID : 264330680408

Option 2 ID : 264330680410

Option 3 ID : 264330680409

Option 4 ID : 264330680407

Status : Answered

Chosen Option : 4

Q.41 According to the Census of India 2011, which group of states recorded the lowest male literacy rate?

- Ans**
- 1. Bihar and Arunachal Pradesh
 - 2. Rajasthan and Arunachal Pradesh
 - 3. Bihar and Rajasthan
 - 4. Arunachal Pradesh and Odisha

Question ID : 264330179512

Option 1 ID : 264330704050

Option 2 ID : 264330704048

Option 3 ID : 264330704047

Option 4 ID : 264330704049

Status : Answered

Chosen Option : 3

Q.42 The first chairman of the Planning Commission in India was _____.

- Ans
- 1. Jaiprakash Narayan
 - 2. Sriman Narayan
 - 3. Jawaharlal Nehru
 - 4. Radha Mohan Singh

Question ID : 264330109991
Option 1 ID : 264330432243
Option 2 ID : 264330432242
Option 3 ID : 264330432241
Option 4 ID : 264330432244
Status : Answered
Chosen Option : 3

Q.43 The Ghode Modni dance, to celebrate the victory of warriors, is performed in which of the following states of India?

- Ans
- 1. Goa
 - 2. West Bengal
 - 3. Karnataka
 - 4. Tamil Nadu

Question ID : 264330110427
Option 1 ID : 264330433986
Option 2 ID : 264330433988
Option 3 ID : 264330433985
Option 4 ID : 264330433987
Status : Not Answered
Chosen Option : --

Q.44 The Charminar was constructed by which of the following dynasties?

- Ans
- 1. Pandya
 - 2. Chera
 - 3. Chalukya
 - 4. Qutb Shahi

Question ID : 264330111851
Option 1 ID : 264330439491
Option 2 ID : 264330439490
Option 3 ID : 264330439492
Option 4 ID : 264330439489
Status : Answered
Chosen Option : 4

Q.45 Net investment can be best expressed using which of the following elements?

- Ans
- 1. Net investment-Depreciation
 - 2. Depletion Value
 - 3. Replacement Cost
 - 4. Gross Investment-Depreciation

Question ID : 264330130661
Option 1 ID : 264330511756
Option 2 ID : 264330511758
Option 3 ID : 264330511757
Option 4 ID : 264330511755
Status : Answered
Chosen Option : 4

Q.46 What is the chemical formula of sodium nitrate?

- Ans
- 1. NaNH_3
 - 2. NaNO_4
 - 3. NaNO_3
 - 4. NaNO_2

Question ID : 264330173646
Option 1 ID : 264330681063
Option 2 ID : 264330681066
Option 3 ID : 264330681065
Option 4 ID : 264330681064
Status : Answered
Chosen Option : 3

Q.47 Geeta Mahalik won the Sangeet Natak Akademi Award for which form of dance?

- Ans
- 1. Odissi
 - 2. Kathakali
 - 3. Bharatanatyam
 - 4. Kuchipudi

Question ID : 26433074883
Option 1 ID : 264330293623
Option 2 ID : 264330293622
Option 3 ID : 264330293621
Option 4 ID : 264330293620
Status : Not Answered
Chosen Option : --

Q.48 'Mahatma Gandhi National Fellowship' ('MGNF') is a two-year academic programme that was launched by _____ in 2020 as part of the SANKALP programme.

- Ans
- 1. IIT Madras
 - 2. IIM Ahmedabad
 - 3. IIT Delhi
 - 4. IIM Bangalore

Question ID : 264330111593
Option 1 ID : 264330438459
Option 2 ID : 264330438458
Option 3 ID : 264330438460
Option 4 ID : 264330438457
Status : Not Answered
Chosen Option : --

Q.49 Who among the following was one of the court poets of the King Samudragupta?

- Ans
- 1. Harisena
 - 2. Surdas
 - 3. Pragyajan
 - 4. Hariharan

Question ID : 264330118957
Option 1 ID : 264330466485
Option 2 ID : 264330466483
Option 3 ID : 264330466486
Option 4 ID : 264330466484
Status : Answered
Chosen Option : 1

Q.50 Which of the following Articles provides the minorities the right to establish and administer educational institutions of their choice?

- Ans
- 1. Article 31
 - 2. Article 30
 - 3. Article 29
 - 4. Article 28

Question ID : 264330120099
 Option 1 ID : 264330470654
 Option 2 ID : 264330470653
 Option 3 ID : 264330470652
 Option 4 ID : 264330470651
 Status : Answered
 Chosen Option : 4

Section : Reasoning

Q.1 Two statements are given followed by two conclusions numbered I and II. Assuming the statements to be true, even if they seem to be at variance with commonly known facts, decide which of the conclusions logically follow(s) from the statements.

Statements:
 All hens are dogs.
 All dogs are peacocks.
Conclusions:
 I. All hens are peacocks.
 II. All peacocks are dogs.

- Ans
- 1. Only conclusion II follows
 - 2. Only conclusion I follows
 - 3. Neither conclusion I nor II follows
 - 4. Both conclusions I and II follow

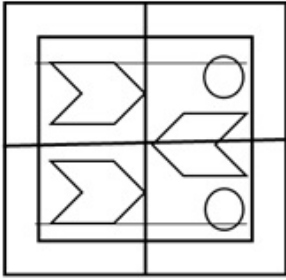
Question ID : 26433045342
 Option 1 ID : 264330177804
 Option 2 ID : 264330177803
 Option 3 ID : 264330177806
 Option 4 ID : 264330177805
 Status : Answered
 Chosen Option : 2

Q.2 In a code language, if PETROL is coded as ODSQNK and ENGINE is coded as DMFHMD, then how will VEHICLE be coded?

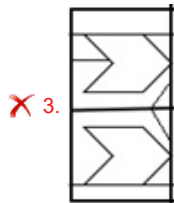
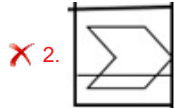
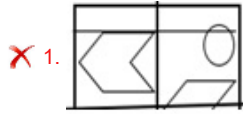
- Ans
- 1. UDGHBKD
 - 2. UDHGKBD
 - 3. WFIJDMF
 - 4. WDIHDKF

Question ID : 26433089488
 Option 1 ID : 264330351454
 Option 2 ID : 264330351456
 Option 3 ID : 264330351453
 Option 4 ID : 264330351455
 Status : Answered
 Chosen Option : 1

Q.3 Select the option figure which is embedded in the given figure as its part (rotation is NOT allowed).

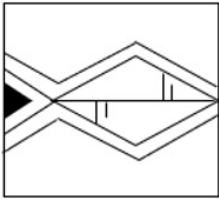


Ans



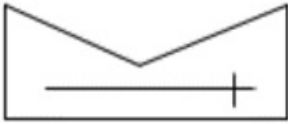
Question ID : 264330116994
 Option 1 ID : 264330460060
 Option 2 ID : 264330460057
 Option 3 ID : 264330460058
 Option 4 ID : 264330460059
 Status : Answered
 Chosen Option : 4

Q.4 Select the option figure which is embedded in the given figure. (Rotation is NOT allowed).

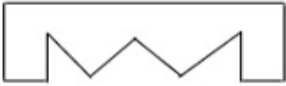


Ans

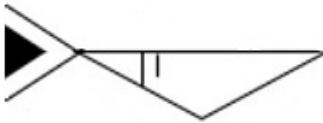
X 1.



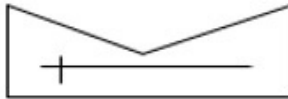
X 2.



✓ 3.



X 4.



Question ID : 26433085532

Option 1 ID : 264330335832

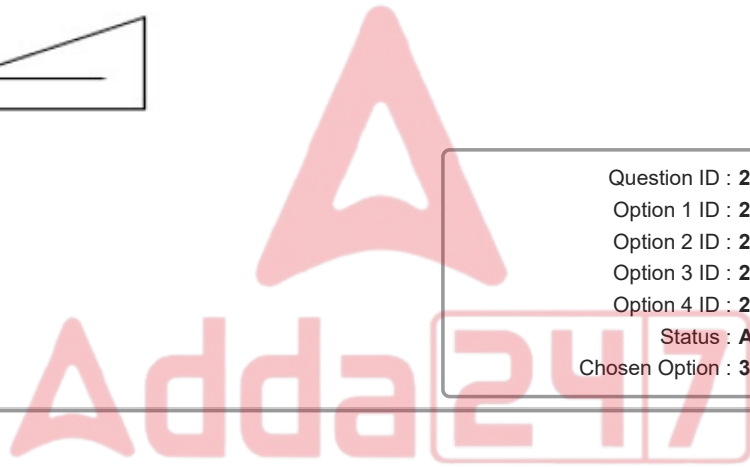
Option 2 ID : 264330335830

Option 3 ID : 264330335829

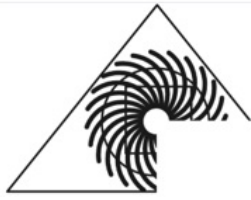
Option 4 ID : 264330335831

Status : Answered

Chosen Option : 3



Q.5 Which of the following option figures will complete the pattern in the figure given below?



Ans



Question ID : 26433080625

Option 1 ID : 264330316436


Option 2 ID : 264330316434

Option 3 ID : 264330316433

Option 4 ID : 264330316435

Status : Answered

Chosen Option : 2



Q.6 Which figure should replace the question mark (?) if the series were to be continued?

6	□	2	6	□	☆	8	□	
L		8		6		P		?
2	☆	☆	□	8	2	2	☆	

Ans


- ✗ 1.

2	8
3	
☆	□
- ✗ 2.

☆	2
8	
□	P
- ✓ 3.

☆	2
	□
P	8
- ✗ 4.

☆	2
	P
□	8



Question ID : 264330130792
 Option 1 ID : 264330512280
 Option 2 ID : 264330512279
 Option 3 ID : 264330512282
 Option 4 ID : 264330512281
 Status : Not Answered
 Chosen Option : --

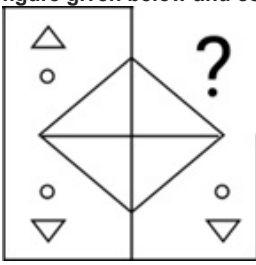
Q.7 Which two signs should be interchanged to make the given equation correct?

$$98 - 49 \div 7 + 74 \times 55 = 3$$

- Ans
- ✗ 1. = and +
 - ✗ 2. = and ×
 - ✓ 3. = and ×
 - ✗ 4. = and -

Question ID : 26433085739
 Option 1 ID : 264330336659
 Option 2 ID : 264330336657
 Option 3 ID : 264330336658
 Option 4 ID : 264330336660
 Status : Answered
 Chosen Option : 3

Q.8 Select the figure from the given options that will replace the question mark (?) in the figure given below and complete the pattern.

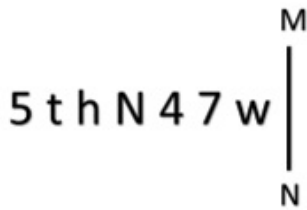


Ans

- ✓ 1.
- ✗ 2.
- ✗ 3.
- ✗ 4.

Question ID : 264330111706
 Option 1 ID : 264330438909
 Option 2 ID : 264330438910
 Option 3 ID : 264330438912
 Option 4 ID : 264330438911
 Status : Answered
 Chosen Option : 1

Q.9 Select the correct mirror image of the given combination when the mirror is placed at MN as shown below.

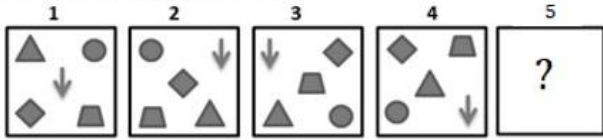


Ans

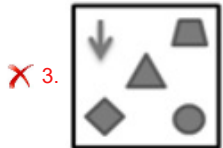
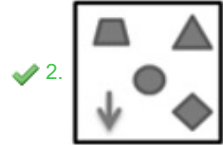
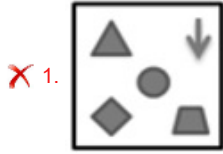
- ✗ 1. W 4 7 N h t 2 5
- ✗ 2. 2 t h N 4 7 w
- ✗ 3. 2 t 4 h N 4 7 w
- ✓ 4. w 4 7 N h t 2 5

Question ID : 264330117004
 Option 1 ID : 264330460099
 Option 2 ID : 264330460097
 Option 3 ID : 264330460098
 Option 4 ID : 264330460100
 Status : Answered
 Chosen Option : 4

Q.10 Each of the following questions consists of 4 figures marked 1, 2, 3 and 4 called the Problem Figures followed by 4 other figures. Select a figure from amongst the Answer Figures which will continue the same series as established by the four Problem Figures.



Ans



Question ID : 264330110536
 Option 1 ID : 264330434421
 Option 2 ID : 264330434424
 Option 3 ID : 264330434423
 Option 4 ID : 264330434422
 Status : Answered
 Chosen Option : 2

Q.11 Which of the following option figures will complete the pattern in the figure given below?



Ans



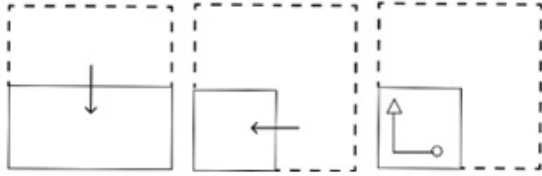
Question ID : 26433089619
 Option 1 ID : 264330351978
 Option 2 ID : 264330351977
 Option 3 ID : 264330351980
 Option 4 ID : 264330351979
 Status : Answered
 Chosen Option : 4

Q.12 Select the option that is related to the fifth letter-cluster in the same way as the second letter-cluster is related to the first letter-cluster and the fourth letter-cluster is related to the third letter-cluster.
 KEEP : SHHN :: HIDE : HGLK :: EXIT : ?

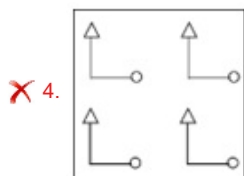
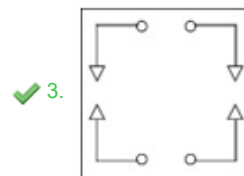
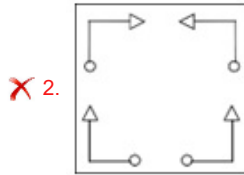
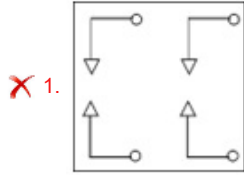
- Ans
- ✗ 1. XLAH
 - ✗ 2. WMBH
 - ✓ 3. WLAH
 - ✗ 4. WLAI

Question ID : 26433076453
 Option 1 ID : 264330299878
 Option 2 ID : 264330299877
 Option 3 ID : 264330299879
 Option 4 ID : 264330299876
 Status : Answered
 Chosen Option : 3

Q.13 A paper is folded and cut as shown below. How will it appear when unfolded?



Ans



Question ID : 264330114714
 Option 1 ID : 264330450944
 Option 2 ID : 264330450942
 Option 3 ID : 264330450941
 Option 4 ID : 264330450943
 Status : Answered
 Chosen Option : 3

Q.14 Select the set in which the numbers are NOT related in the same way as are the numbers of the following sets.

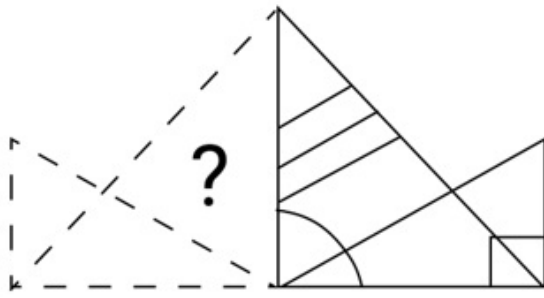
(59, 236, 175), (24, 124, 98)

(NOTE: Operations should be performed on the whole numbers, without breaking down the numbers into its constituent digits.)

- Ans
- ✗ 1. (22, 183, 159)
 - ✓ 2. (21, 124, 108)
 - ✗ 3. (64, 182, 116)
 - ✗ 4. (16, 206, 188)

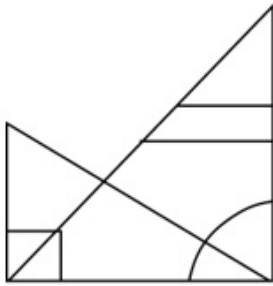
Question ID : 26433097244
 Option 1 ID : 264330381675
 Option 2 ID : 264330381673
 Option 3 ID : 264330381676
 Option 4 ID : 264330381674
 Status : Answered
 Chosen Option : 4

Q.15 Select the figure from the options that can replace the question mark (?) and complete the given pattern.

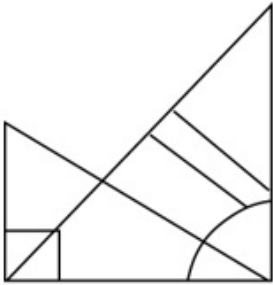


Ans

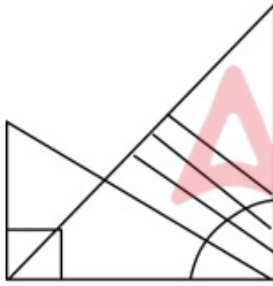
✗ 1.



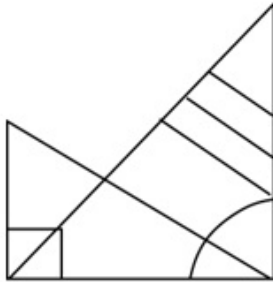
✗ 2.



✗ 3.



✓ 4.



Question ID : 264330106481
 Option 1 ID : 264330418225
 Option 2 ID : 264330418227
 Option 3 ID : 264330418228
 Option 4 ID : 264330418226
 Status : Answered
 Chosen Option : 4

Q.16 Select the correct mirror image of the given figure when the mirror is placed at MN as shown below.



- Ans
- 1. X4502TAU
 - 2. X4002TAN
 - 3. X4002TAU
 - 4. X4002TAU

Question ID : 264330126676
 Option 1 ID : 264330496377
 Option 2 ID : 264330496376
 Option 3 ID : 264330496379
 Option 4 ID : 264330496378
 Status : Answered
 Chosen Option : 3

Q.17 Select the correct combination of mathematical signs to sequentially replace the * signs and to balance the given equation.
 $11 * 12 * 70 * 175 * 5 * 97$

- Ans
- 1. x, +, -, +, =
 - 2. x, -, +, +, =
 - 3. +, x, -, +, =
 - 4. x, -, +, =, +



Question ID : 26433076551
 Option 1 ID : 264330300269
 Option 2 ID : 264330300268
 Option 3 ID : 264330300270
 Option 4 ID : 264330300271
 Status : Answered
 Chosen Option : 2

Q.18 C, D, E, F, G and H were six women, sitting around a circular table, equidistant from each other, facing the centre. D and E were sitting immediately next to each other. F and H were sitting immediately next to each other. G was to the immediate right of C. E was to the immediate right of F. D was to the immediate left of C. Who among the following was sitting third to the left of D?

- Ans
- 1. F
 - 2. G
 - 3. C
 - 4. H

Question ID : 26433087010
 Option 1 ID : 264330341681
 Option 2 ID : 264330341683
 Option 3 ID : 264330341684
 Option 4 ID : 264330341682
 Status : Answered
 Chosen Option : 4

Q.19 Which of the following options will replace the question mark (?) in the given series?
 13, 104, 52, 416, 208, ?, 832

- Ans
- 1. 1664
 - 2. 1158
 - 3. 790
 - 4. 690

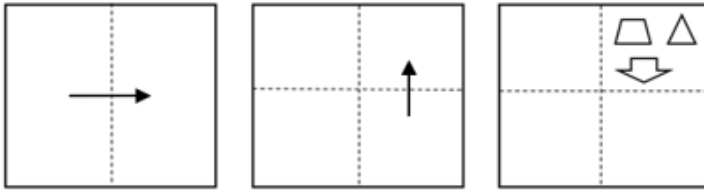
Question ID : 264330109435
 Option 1 ID : 264330430020
 Option 2 ID : 264330430018
 Option 3 ID : 264330430019
 Option 4 ID : 264330430017
 Status : Answered
 Chosen Option : 1

Q.20 Which of the following letter clusters will replace the question mark (?) in the given series to make it logically complete?
 RTE, PVC, NXA, LZY, ?

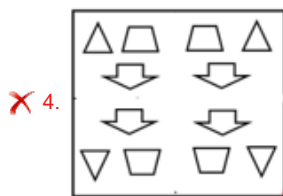
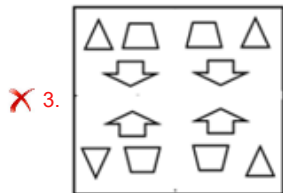
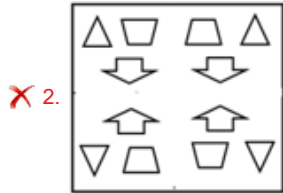
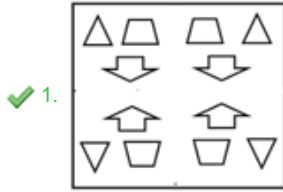
- Ans
- 1. JBW
 - 2. JBX
 - 3. KXV
 - 4. JBA

Question ID : 264330102230
 Option 1 ID : 264330401385
 Option 2 ID : 264330401387
 Option 3 ID : 264330401388
 Option 4 ID : 264330401386
 Status : Answered
 Chosen Option : 1

Q.21 A paper is folded and cut as shown below. How will it appear when unfolded?

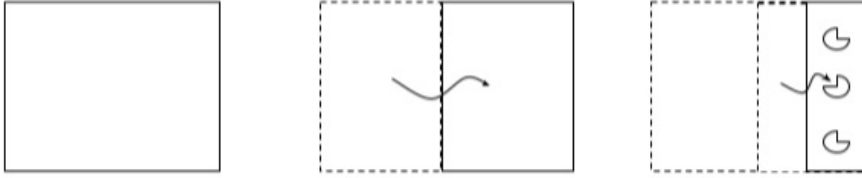


Ans

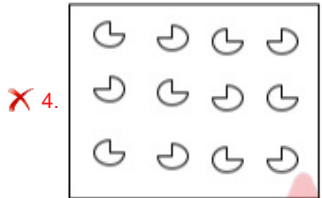
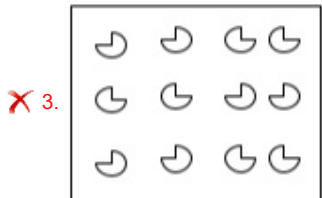
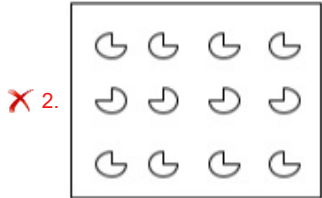
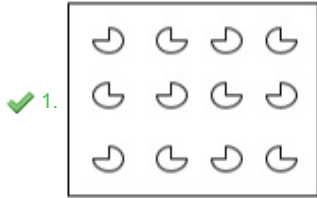


Question ID : 264330113647
 Option 1 ID : 264330446674
 Option 2 ID : 264330446676
 Option 3 ID : 264330446675
 Option 4 ID : 264330446673
 Status : Answered
 Chosen Option : 1

Q.22 A paper is folded and cut as shown below. How will it appear when unfolded?



Ans



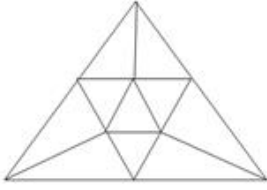
Question ID : 264330118716
 Option 1 ID : 264330466117
 Option 2 ID : 264330466116
 Option 3 ID : 264330466118
 Option 4 ID : 264330466115
 Status : Answered
 Chosen Option : 1

Q.23 Select the option that is related to the fourth term in the same way as the first term is related to the second term and the fifth term is related to the sixth term.
 $8 : 199 :: ? : 439 :: 5 : 82$

- Ans
- ✗ 1. 16
 - ✗ 2. 14
 - ✓ 3. 12
 - ✗ 4. 10

Question ID : 26433059943
 Option 1 ID : 264330234607
 Option 2 ID : 264330234606
 Option 3 ID : 264330234605
 Option 4 ID : 264330234604
 Status : Not Answered
 Chosen Option : --

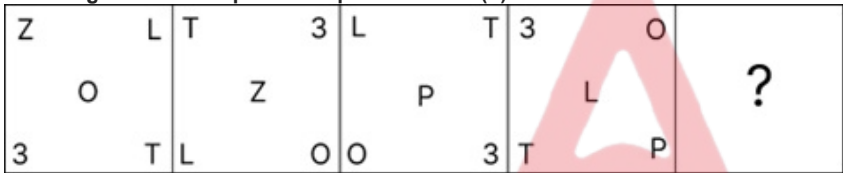
Q.24 How many triangles are there in the following figure?



- Ans
- 1. 18
 - 2. 12
 - 3. 15
 - 4. 10

Question ID : 26433076732
 Option 1 ID : 264330300995
 Option 2 ID : 264330300993
 Option 3 ID : 264330300994
 Option 4 ID : 264330300992
 Status : Answered
 Chosen Option : 3

Q.25 Which figure should replace the question mark (?) if the series were to be continued?



Ans

- 1.

P	T
	O
L	3
- 2.

O	P
	☆
3	T
- 3.

T	3
	☆
P	O
- 4.

O	P
	L
3	T

Question ID : 264330130812
 Option 1 ID : 264330512360
 Option 2 ID : 264330512361
 Option 3 ID : 264330512359
 Option 4 ID : 264330512362
 Status : Not Answered
 Chosen Option : --

Q.1 A hemispherical bowl is made of steel whose thickness is 2 cm. The inside radius of the bowl is 3 cm. Find the volume (in cm^3) of the steel used in making the bowl. (Rounded off to 2 decimal places)

(Take $\pi = \frac{22}{7}$)

- Ans
- 1. 245.14
 - 2. 280.75
 - 3. 211.25
 - 4. 205.33

Question ID : 264330112432

Option 1 ID : 264330441815

Option 2 ID : 264330441813

Option 3 ID : 264330441816

Option 4 ID : 264330441814

Status : Answered

Chosen Option : 4

Q.2 What is the difference (in ₹) between the compound interest, when interest is compounded 6-monthly, and the simple interest on a sum of ₹10,000 for $1\frac{1}{2}$ years at 10% p.a.?

- Ans
- 1. 75.26
 - 2. 76.25
 - 3. 71.65
 - 4. 72.65

Question ID : 264330103676

Option 1 ID : 264330407012

Option 2 ID : 264330407011

Option 3 ID : 264330407009

Option 4 ID : 264330407010

Status : Answered

Chosen Option : 2

Q.3 The smallest 4-digit prime number is:

- Ans
- 1. 1009
 - 2. 1007
 - 3. 1003
 - 4. 1001

Question ID : 264330104479

Option 1 ID : 264330410219

Option 2 ID : 264330410220

Option 3 ID : 264330410218

Option 4 ID : 264330410217

Status : Answered

Chosen Option : 3

Q.4 14 men can complete a piece of work in 6 days, while 20 women can complete the same work in 8 days. 7 men started working on the job, and after working for 3 days all of them stopped working. How many women should be put on the job to complete the remaining work, if it is to be completed in 6 days?

- Ans 1. 20
 2. 25
 3. 15
 4. 30

Question ID : 264330103745
 Option 1 ID : 264330407286
 Option 2 ID : 264330407287
 Option 3 ID : 264330407285
 Option 4 ID : 264330407288
 Status : Answered
 Chosen Option : 1

Q.5 What is the greatest possible length (in cm) of scale to measure exactly the following lengths : 1 m, 20 cm, 3 m, 90 cm?

- Ans 1. 30
 2. 10
 3. 45
 4. 50

Question ID : 264330119496
 Option 1 ID : 264330468267
 Option 2 ID : 264330468269
 Option 3 ID : 264330468268
 Option 4 ID : 264330468270
 Status : Answered
 Chosen Option : 2

Q.6 By selling an article, a shopkeeper makes a profit of 30% of its selling price. Find his profit percentage.

- Ans 1. 40%
 2. $46\frac{1}{3}\%$
 3. $42\frac{6}{7}\%$
 4. 44%

Question ID : 264330111461
 Option 1 ID : 264330437929
 Option 2 ID : 264330437932
 Option 3 ID : 264330437930
 Option 4 ID : 264330437931
 Status : Answered
 Chosen Option : 3

Q.7 Find the total percentage change in the volume of a cuboid if its length and breadth are decreased by 10% and 20%, respectively, while its height is increased by 30%.

- Ans 1. 6.4%
 2. 8.2%
 3. 9.1%
 4. 8.6%

Question ID : 264330103698
Option 1 ID : 264330407097
Option 2 ID : 264330407098
Option 3 ID : 264330407099
Option 4 ID : 264330407100
Status : Answered
Chosen Option : 1

Q.8 Trader A offers a discount of 25% on the marked price for cash purchase. Trader B offers a trade discount of 20% and a cash discount of 4% on the same article marked at the same price as that of Trader A. If the discount given by Trader A is ₹360 more than the discount given by Trader B, then what is the marked price of the item (in rupees)?

- Ans 1. 19,000
 2. 18,000
 3. 30,000
 4. 20,000

Question ID : 264330131351
Option 1 ID : 264330514518
Option 2 ID : 264330514516
Option 3 ID : 264330514515
Option 4 ID : 264330514517
Status : Answered
Chosen Option : 4

Q.9 If the average of 8, 6, 14, 7 and x is 11, then the value of x is:

- Ans 1. 18
 2. 20
 3. 22
 4. 15

Question ID : 264330118197
Option 1 ID : 264330464604
Option 2 ID : 264330464605
Option 3 ID : 264330464606
Option 4 ID : 264330464603
Status : Answered
Chosen Option : 2

Q.10 A policeman chases a thief. The speed of the policeman and thief is 8 km/h and 7 km/h, respectively. If the policeman started 6 minutes late, after running how much distance will he be able to catch the thief?

- Ans
- 1. 5.5 km
 - 2. 5.6 km
 - 3. 6 km
 - 4. 6.3 km

Question ID : 264330183832
 Option 1 ID : 264330721004
 Option 2 ID : 264330721005
 Option 3 ID : 264330721006
 Option 4 ID : 264330721007
 Status : Answered
 Chosen Option : 2

Q.11 Simplify $1.6 + 1.2 \times \frac{1}{4} - \{\frac{1}{5} + (1 - 0.8)\}$.

- Ans
- 1. 1.5
 - 2. 1.4
 - 3. 1.6
 - 4. 1.8

Question ID : 264330104216
 Option 1 ID : 264330409167
 Option 2 ID : 264330409166
 Option 3 ID : 264330409168
 Option 4 ID : 264330409165
 Status : Answered
 Chosen Option : 3

Q.12 A person took a loan of ₹1,200 on simple interest for as many years as the rate of interest. If he paid ₹432 as interest at the end of the loan period, what was the rate of interest per annum?

- Ans
- 1. 9%
 - 2. 8%
 - 3. 5%
 - 4. 6%

Question ID : 264330119420
 Option 1 ID : 264330467967
 Option 2 ID : 264330467969
 Option 3 ID : 264330467968
 Option 4 ID : 264330467970
 Status : Answered
 Chosen Option : 4

Q.13 एक सभा में 350 स्काउट्स को दूध परोसा गया। उनमें से प्रत्येक को 10 cm आधार त्रिज्या और 15 cm ऊँचाई वाले बेलनाकार गिलास में दूध दिया गया। यदि दाता ने ₹50 प्रति लीटर की दर से दूध खरीदा, तो कितनी राशि खर्च की गई? (बेलनाकार कागज के गिलास आदि की कीमत पर ध्यान न दें)

- Ans
- 1. ₹80,000
 - 2. ₹82,500
 - 3. ₹81,000
 - 4. ₹83,000

Question ID : 26433090273
 Option 1 ID : 264330354569
 Option 2 ID : 264330354571
 Option 3 ID : 264330354570
 Option 4 ID : 264330354572
 Status : Answered
 Chosen Option : 2

Q.14 Ajay's test marks in two subjects, Mathematics and Science, are in the ratio 9 : 13. If he got 16 marks more in Science than in Mathematics, what are his marks in Mathematics?

- Ans
- 1. 27
 - 2. 36
 - 3. 54
 - 4. 45

Question ID : 264330129425
 Option 1 ID : 264330507068
 Option 2 ID : 264330507067
 Option 3 ID : 264330507069
 Option 4 ID : 264330507066
 Status : Answered
 Chosen Option : 2

Q.15 A man loses 25% of his money. After spending 60% of the remaining money, he has ₹360 left. What is the amount of money (in ₹) he originally had?

- Ans
- 1. 1200
 - 2. 1962
 - 3. 654
 - 4. 2400

Question ID : 264330104238
 Option 1 ID : 264330409254
 Option 2 ID : 264330409253
 Option 3 ID : 264330409255
 Option 4 ID : 264330409256
 Status : Answered
 Chosen Option : 1

Q.1 Which of the following is an address on the world wide web that is used to access specific web resources and is the specific path to a resource?

- Ans
- 1. Hyperlink
 - 2. Web server
 - 3. Web pages
 - 4. Uniform resource locator

Question ID : 264330180809
Option 1 ID : 264330709199
Option 2 ID : 264330709202
Option 3 ID : 264330709201
Option 4 ID : 264330709200
Status : Answered
Chosen Option : 4

Q.2 The keyboard shortcut for opening a new document in Microsoft Word 365, while another document is already open, is _____.

- Ans
- 1. Ctrl + N
 - 2. Ctrl + Y
 - 3. Ctrl + S
 - 4. Ctrl + P

Question ID : 264330182072
Option 1 ID : 264330714128
Option 2 ID : 264330714130
Option 3 ID : 264330714127
Option 4 ID : 264330714129
Status : Answered
Chosen Option : 1

Q.3 Which of the following is NOT used to edit text in MS-Word 365?

- Ans
- 1. Making text as Bold/Italic
 - 2. Changing Font Color
 - 3. Making text as Left align
 - 4. Changing Font Style

Question ID : 264330178285
Option 1 ID : 264330699197
Option 2 ID : 264330699196
Option 3 ID : 264330699198
Option 4 ID : 264330699195
Status : Answered
Chosen Option : 3

Q.4 Which of the following tabs in MS Word 365, allows you to customise the page size in the Page Setup dialog box?

- Ans
- 1. Layout
 - 2. File
 - 3. Edit
 - 4. Insert

Question ID : 264330180429
Option 1 ID : 264330707685
Option 2 ID : 264330707684
Option 3 ID : 264330707683
Option 4 ID : 264330707686
Status : Answered
Chosen Option : 4

Q.5 While composing an email, what does the user have to write in the 'Subject' field?

- Ans
- 1. A smiley or emoji to make the email more interesting
 - 2. The recipient's email address
 - 3. The main topic of an email message
 - 4. The sender's email address

Question ID : 264330182094
Option 1 ID : 264330714218
Option 2 ID : 264330714215
Option 3 ID : 264330714216
Option 4 ID : 264330714217
Status : Answered
Chosen Option : 3

Q.6 Which of the following document settings can be changed from the layout tab of MS word 365?

- Ans
- 1. Change styles
 - 2. Margins
 - 3. Macros
 - 4. Spelling grammar

Question ID : 264330175982
Option 1 ID : 264330690226
Option 2 ID : 264330690223
Option 3 ID : 264330690224
Option 4 ID : 264330690225
Status : Answered
Chosen Option : 3

Q.7 Which Microsoft Excel 365, function is used to join or concatenate text strings from different cells?

- Ans
- 1. CONCATENATE
 - 2. MERGE
 - 3. ADD
 - 4. JOIN

Question ID : 264330180692
Option 1 ID : 264330708735
Option 2 ID : 264330708737
Option 3 ID : 264330708736
Option 4 ID : 264330708738
Status : Answered
Chosen Option : 2

Q.8 Which of the following statements about autofitting the row height in MS Excel 365 is correct?

- Ans
- 1. Single-clicking on the boundary between row headers will automatically adjust the row height to fit the content.
 - 2. Double-clicking on the boundary between row headers will automatically adjust the row height to fit the content.
 - 3. Double-clicking on the boundary between column headers will automatically adjust the column height to fit the content.
 - 4. Single-clicking on the boundary between column headers will automatically adjust the column height to fit the content.

Question ID : 264330180824

Option 1 ID : 264330709262

Option 2 ID : 264330709259

Option 3 ID : 264330709261

Option 4 ID : 264330709260

Status : Not Answered

Chosen Option : --

Q.9 In MS Excel 365, Which function from the following list is used to tally the quantity of empty cells within a specified cell range?

- Ans
- 1. COUNTB()
 - 2. COUNTA()
 - 3. COUNT()
 - 4. COUNTBLANK()

Question ID : 264330179437

Option 1 ID : 264330703754

Option 2 ID : 264330703752

Option 3 ID : 264330703751

Option 4 ID : 264330703753

Status : Answered

Chosen Option : 2

Q.10 Which of the following is used to print the document in MS-Word 365?

- Ans
- 1. File->print
 - 2. Design->print
 - 3. Home->print
 - 4. View->print

Question ID : 264330178279

Option 1 ID : 264330699171

Option 2 ID : 264330699173

Option 3 ID : 264330699172

Option 4 ID : 264330699174

Status : Answered

Chosen Option : 3