

Delhi Police Constable (Exe)

Previous Year Paper
15 Nov, 2023 Shift 1



Test Prime

ALL EXAMS,
ONE SUBSCRIPTION



70,000+
Mock Tests



Personalised
Report Card



Unlimited
Re-Attempt



600+
Exam Covered



Previous Year
Papers



500%
Refund



ATTEMPT FREE MOCK NOW

Constable Executive Male and Female in Delhi Police Examination 2023

Roll Number	
Candidate Name	
Venue Name	
Exam Date	15/11/2023
Exam Time	9:00 AM - 10:30 AM
Subject	Constable Executive Male and Female in Delhi Police Examination 2023

Section : **General Knowledge**

Q.1 How many medals did India win in the International Shooting Sport Federation (ISSF) World Cup-2022, which was held in Cairo, Egypt?

- Ans
- 1. 5
 - 2. 4
 - 3. 7
 - 4. 6

Question ID : 264330113744
 Option 1 ID : 264330447063
 Option 2 ID : 264330447064
 Option 3 ID : 264330447061
 Option 4 ID : 264330447062

Status : **Not Answered**

Chosen Option : --

Q.2 Narthaki Nataraj, awarded with Padma Shri in 2019 is an Indian _____ dancer.

- Ans
- 1. Odissi
 - 2. Bharatanatyam
 - 3. Kathakali
 - 4. Kathak

Question ID : 26433094878
 Option 1 ID : 264330372335
 Option 2 ID : 264330372334
 Option 3 ID : 264330372336
 Option 4 ID : 264330372333

Status : **Not Answered**

Chosen Option : --

Q.3 The innermost sanctum of a Hindu temple where the idol of the main deity is placed is called:

- Ans
- 1. Garbhagriha
 - 2. Mandapa
 - 3. Pradakshina path
 - 4. Shikhara

Question ID : 26433072939
 Option 1 ID : 264330285948
 Option 2 ID : 264330285950
 Option 3 ID : 264330285949
 Option 4 ID : 264330285951

Status : **Answered**

Chosen Option : 1

Q.4 In which state of India from the following is the old bamboo drip irrigation technology still used in the agriculture?

- Ans
- 1. Maharashtra
 - 2. Chhattisgarh
 - 3. Meghalaya
 - 4. Telangana

Question ID : 264330182946
Option 1 ID : 264330717519
Option 2 ID : 264330717516
Option 3 ID : 264330717518
Option 4 ID : 264330717517
Status : Not Answered
Chosen Option : --

Q.5 Which Constitutional Amendment Act has replaced the collegium system of appointing judges to the Supreme Court and High Courts?

- Ans
- 1. 99th Amendment Act
 - 2. 65th Amendment Act
 - 3. 82nd Amendment Act
 - 4. 52nd Amendment Act

Question ID : 264330166153
Option 1 ID : 264330651682
Option 2 ID : 264330651680
Option 3 ID : 264330651681
Option 4 ID : 264330651679
Status : Answered
Chosen Option : 1

Q.6 Who led the English Forces in the Battle of Buxar?

- Ans
- 1. Hector Munro
 - 2. Sir Hugh Wheeler
 - 3. Henry Lawrence
 - 4. John Nicholson

Question ID : 264330171699
Option 1 ID : 264330673399
Option 2 ID : 264330673402
Option 3 ID : 264330673401
Option 4 ID : 264330673400
Status : Answered
Chosen Option : 1

Q.7 Under which Article of the Indian Constitution are Fundamental Duties mentioned?

- Ans
- 1. Article 50B
 - 2. Article 44C
 - 3. Article 51A
 - 4. Article 55D

Question ID : 264330114137
Option 1 ID : 264330448634
Option 2 ID : 264330448633
Option 3 ID : 264330448635
Option 4 ID : 264330448636
Status : Answered
Chosen Option : 3

Q.8 Which of the following Indian players has written the autobiography titled 'Ace Against Odds'?

- Ans
- 1. Saina Nehwal
 - 2. Maria Sharapova
 - 3. Monica Seles
 - 4. Sania Mirza

Question ID : 26433055355
 Option 1 ID : 264330216404
 Option 2 ID : 264330216405
 Option 3 ID : 264330216407
 Option 4 ID : 264330216406
 Status : Answered
 Chosen Option : 4

Q.9 The Ahaia Winter Festival is primarily organised by the North-Eastern state of _____ to promote tourism.

- Ans
- 1. Meghalaya
 - 2. Tripura
 - 3. Arunachal Pradesh
 - 4. Sikkim

Question ID : 264330182996
 Option 1 ID : 264330717716
 Option 2 ID : 264330717718
 Option 3 ID : 264330717717
 Option 4 ID : 264330717719
 Status : Not Answered
 Chosen Option : --

Q.10 Which of the following countries hosts the first para Asiad?

- Ans
- 1. South Korea
 - 2. China
 - 3. Japan
 - 4. India

Question ID : 264330132536
 Option 1 ID : 264330519242
 Option 2 ID : 264330519240
 Option 3 ID : 264330519241
 Option 4 ID : 264330519239
 Status : Answered
 Chosen Option : 2

Q.11 Who among the following Padma Bhushan awardee dancers was called to perform for the coronation festivities of Queen Elizabeth II?

- Ans
- 1. Birju Maharaj
 - 2. Kumari Kamala
 - 3. Yamini Krishnamurthy
 - 4. Alarmel Velli

Question ID : 264330112878
 Option 1 ID : 264330443597
 Option 2 ID : 264330443600
 Option 3 ID : 264330443598
 Option 4 ID : 264330443599
 Status : Not Answered
 Chosen Option : --

Q.12 Freedom of Conscience provided in Article 25 of the Constitution of India is strengthened by which of the following two articles?

- Ans**
- 1. Article 27 and 28
 - 2. Article 27 and 29
 - 3. Article 26 and 28
 - 4. Article 24 and 28

Question ID : 264330110580
 Option 1 ID : 264330434600
 Option 2 ID : 264330434598
 Option 3 ID : 264330434599
 Option 4 ID : 264330434597
 Status : Not Answered
 Chosen Option : --

Q.13 The Article 350 (B) of the Indian Constitution deals with the .

- Ans**
- 1. finance commission
 - 2. election commission
 - 3. special officer for linguistic minorities
 - 4. UPSC

Question ID : 26433089965
 Option 1 ID : 264330353340
 Option 2 ID : 264330353338
 Option 3 ID : 264330353339
 Option 4 ID : 264330353337
 Status : Answered
 Chosen Option : 3

Q.14 Who wrote the novel 'Train to Pakistan'?

- Ans**
- 1. Vikram Seth
 - 2. Mulk Raj Anand
 - 3. Khushwant Singh
 - 4. Bhasham Sahni

Question ID : 26433064225
 Option 1 ID : 264330251495
 Option 2 ID : 264330251492
 Option 3 ID : 264330251493
 Option 4 ID : 264330251494
 Status : Answered
 Chosen Option : 3

Q.15 Which of the following union territories recorded the highest sex ratio at birth in India in 2020 as per annual report on vital statistics based on Civil Registration System Report?

- Ans**
- 1. Jammu and Kashmir
 - 2. Ladakh
 - 3. Lakshadweep
 - 4. Chandigarh

Question ID : 264330177911
 Option 1 ID : 264330697734
 Option 2 ID : 264330697733
 Option 3 ID : 264330697731
 Option 4 ID : 264330697732
 Status : Not Answered
 Chosen Option : --

Q.16 The original Constitution contained 395 Articles divided into _____ parts.

- Ans 1. 22
 2. 19
 3. 21
 4. 24

Question ID : 264330134565
Option 1 ID : 264330527215
Option 2 ID : 264330527216
Option 3 ID : 264330527217
Option 4 ID : 264330527218
Status : Answered
Chosen Option : 1

Q.17 Norman Borlaug, known as the Father of Green Revolution for the world, belongs to which country?

- Ans 1. US
 2. New Zealand
 3. Australia
 4. Germany

Question ID : 26433054811
Option 1 ID : 264330214231
Option 2 ID : 264330214229
Option 3 ID : 264330214228
Option 4 ID : 264330214230
Status : Answered
Chosen Option : 1

Q.18 In which country was the Theosophical Society founded?

- Ans 1. England
 2. America
 3. France
 4. Japan

Question ID : 264330114050
Option 1 ID : 264330448286
Option 2 ID : 264330448288
Option 3 ID : 264330448285
Option 4 ID : 264330448287
Status : Answered
Chosen Option : 1

Q.19 What are the most common type of earthquakes?

- Ans 1. Volcanic earthquakes
 2. Seismic earthquakes
 3. Reservoir earthquakes
 4. Tectonic earthquakes

Question ID : 264330134900
Option 1 ID : 264330528535
Option 2 ID : 264330528538
Option 3 ID : 264330528536
Option 4 ID : 264330528537
Status : Answered
Chosen Option : 4

Q.20 Which government scheme's main aim is to 'transform rural poor youth into an economically independent and globally relevant workforce'?

- Ans**
- 1. Shyama Prasad Mukherjee Rurban Mission
 - 2. National Career Service
 - 3. Deen Dayal Upadhyaya Grameen Kaushalya Yojana
 - 4. Deendayal Antyodaya Yojana- National Rural Livelihood Mission

Question ID : 264330109413
 Option 1 ID : 264330429931
 Option 2 ID : 264330429932
 Option 3 ID : 264330429930
 Option 4 ID : 264330429929
 Status : Answered
 Chosen Option : 3

Q.21 Who among the following personalities is an award-winning Mohiniyattam Dancer?

- Ans**
- 1. Meenakshi Chitharanjan
 - 2. Vasundhara Doraswamy
 - 3. Neena Prasad
 - 4. Sutapa Talukdar

Question ID : 264330181386
 Option 1 ID : 264330711467
 Option 2 ID : 264330711469
 Option 3 ID : 264330711468
 Option 4 ID : 264330711470
 Status : Not Answered
 Chosen Option : --

Q.22 The scheme called Bringing Green Revolution to Eastern India is being implemented in how many eastern states?

- Ans**
- 1. Four
 - 2. Seven
 - 3. Three
 - 4. Six

Question ID : 264330109401
 Option 1 ID : 264330429882
 Option 2 ID : 264330429884
 Option 3 ID : 264330429881
 Option 4 ID : 264330429883
 Status : Answered
 Chosen Option : 2

Q.23 According to Census of India, 2011 Which of the following is in the top three states with highest population of age 0-6 years?

- Ans**
- 1. Maharashtra
 - 2. Assam
 - 3. Kerala
 - 4. Madhya Pradesh

Question ID : 264330119969
 Option 1 ID : 264330470153
 Option 2 ID : 264330470151
 Option 3 ID : 264330470154
 Option 4 ID : 264330470152
 Status : Not Answered
 Chosen Option : --

Q.24 India announced the NEP in 1991. NEP stands for _____ .

- Ans 1. New Economic Policy
 2. National Export Plan
 3. National Economic Policy
 4. New Economic Provision

Question ID : 264330109128
Option 1 ID : 264330428790
Option 2 ID : 264330428792
Option 3 ID : 264330428791
Option 4 ID : 264330428789
Status : Answered
Chosen Option : 3

Q.25 Shambhu Maharaj was conferred the Sangeet Natak Akademi Fellowship for which form of dance?

- Ans 1. Kuchipudi
 2. Kathak
 3. Bharatanatyam
 4. Manipuri

Question ID : 26433074870
Option 1 ID : 264330293569
Option 2 ID : 264330293570
Option 3 ID : 264330293571
Option 4 ID : 264330293568
Status : Answered
Chosen Option : 2

Q.26 Gross national product is the total market value of all final goods and services produced by _____.

- Ans 1. nationals and NRIs of a country during a period of five years
 2. Country's residents over a period of time
 3. national and foreigners during a period of two years
 4. nationals of a country during a period of five year

Question ID : 264330120880
Option 1 ID : 264330473737
Option 2 ID : 264330473735
Option 3 ID : 264330473736
Option 4 ID : 264330473738
Status : Answered
Chosen Option : 2

Q.27 At which Olympic Games did the Indian hockey men's team win its last gold medal?

- Ans 1. 2008
 2. 1980
 3. 2012
 4. 1996

Question ID : 264330110374
Option 1 ID : 264330433775
Option 2 ID : 264330433773
Option 3 ID : 264330433776
Option 4 ID : 264330433774
Status : Answered
Chosen Option : 2

Q.28 Select the most appropriate option with respect to the correctness of the following statements.

- a) India has great potential for the development of tidal energy.
b) A geothermal energy plant has been commissioned at Manikaran in Himachal Pradesh.

- Ans 1. Both a and b are correct
 2. Only a is correct
 3. Both a and b are incorrect
 4. Only b is correct

Question ID : 264330179017
Option 1 ID : 264330702073
Option 2 ID : 264330702071
Option 3 ID : 264330702074
Option 4 ID : 264330702072
Status : Marked For Review
Chosen Option : 1

Q.29 Which of the following parts/structures is located at the topmost part of a Stupa?

- Ans 1. Torana
 2. Harmika
 3. Vedika
 4. Medhi

Question ID : 264330165323
Option 1 ID : 264330648374
Option 2 ID : 264330648371
Option 3 ID : 264330648373
Option 4 ID : 264330648372
Status : Answered
Chosen Option : 1

Q.30 Sandeep Das is famous for playing which of the following percussion instruments?

- Ans 1. Pakhawaj
 2. Tabla
 3. Kanjira
 4. Ghatam

Question ID : 264330111939
Option 1 ID : 264330439842
Option 2 ID : 264330439844
Option 3 ID : 264330439841
Option 4 ID : 264330439843
Status : Not Answered
Chosen Option : --

Q.31 Arakan and Shan are recognised ethnic groups of _____.

- Ans 1. Myanmar
 2. Sri Lanka
 3. Nepal
 4. Bhutan

Question ID : 264330177916
Option 1 ID : 264330697753
Option 2 ID : 264330697754
Option 3 ID : 264330697752
Option 4 ID : 264330697751
Status : Not Answered
Chosen Option : --

Q.32 In which of the following States was the 37th National Junior Athletics Championship held?

- Ans 1. Manipur
 2. Nagaland
 3. Assam
 4. Mizoram

Question ID : 264330113757
Option 1 ID : 264330447116
Option 2 ID : 264330447115
Option 3 ID : 264330447113
Option 4 ID : 264330447114
Status : Not Answered
Chosen Option : --

Q.33 Who among the following introduced binominal nomenclature of biological classification?

- Ans 1. Aristotle
 2. John Ray
 3. Charles Darwin
 4. Linnaeus

Question ID : 264330117587
Option 1 ID : 264330462374
Option 2 ID : 264330462375
Option 3 ID : 264330462376
Option 4 ID : 264330462373
Status : Not Answered
Chosen Option : --

Q.34 According to the PRS report of the Ministry of Agriculture, which two crops contributed to 78% of the country's food grain production till 2015-16?

- Ans 1. Maize and soybeans
 2. Millets and pulses
 3. Wheat and rice
 4. Pulses and sugarcane

Question ID : 264330120359
Option 1 ID : 264330471687
Option 2 ID : 264330471690
Option 3 ID : 264330471689
Option 4 ID : 264330471688
Status : Answered
Chosen Option : 3

Q.35 Coal, petroleum, and kerosene are examples of:

- Ans
- 1. coal fuels
 - 2. fossil fuels
 - 3. renewable resources
 - 4. clean energy resources

Question ID : 264330120955
Option 1 ID : 264330474035
Option 2 ID : 264330474037
Option 3 ID : 264330474036
Option 4 ID : 264330474038
Status : Answered
Chosen Option : 2

Q.36 Which Constitutional Amendment Act amended Article 38, enumerated under the Directive Principles of State Policy, and directed 'State to minimise inequalities in income, status, facilities and opportunities'?

- Ans
- 1. 43
 - 2. 42
 - 3. 44
 - 4. 40

Question ID : 264330119697
Option 1 ID : 264330469065
Option 2 ID : 264330469064
Option 3 ID : 264330469066
Option 4 ID : 264330469063
Status : Answered
Chosen Option : 2

Q.37 Why did Mother Teresa establish the 'Nirmal Hriday' Hospice?

- Ans
- 1. To provide a place where the terminally ill could die in peace
 - 2. To provide a home for orphan girl-children
 - 3. To provide a refuge for patients of leprosy
 - 4. To provide a home for young widows

Question ID : 264330119011
Option 1 ID : 264330466702
Option 2 ID : 264330466700
Option 3 ID : 264330466699
Option 4 ID : 264330466701
Status : Answered
Chosen Option : 3

Q.38 Which of the following correctly describes chemotherapy?

- Ans
- 1. Use of motivational advice as treatment
 - 2. Use of physical exercise for treatment
 - 3. Use of chemicals for therapeutic purposes
 - 4. Use of treatment for behavioural disorder

Question ID : 264330120017
Option 1 ID : 264330470325
Option 2 ID : 264330470324
Option 3 ID : 264330470323
Option 4 ID : 264330470326
Status : Answered
Chosen Option : 3

Q.39 Who was the first Indian to qualify for the covenanted civil services in India?

- Ans
- 1. Surendra Nath Banerjee
 - 2. Subhas Chandra Bose
 - 3. Satyendra Nath Tagore
 - 4. Rajagopalachari

Question ID : 264330120303
 Option 1 ID : 264330471465
 Option 2 ID : 264330471464
 Option 3 ID : 264330471463
 Option 4 ID : 264330471466
 Status : Marked For Review
 Chosen Option : 3

Q.40 What is the sanctioned judge strength of the Supreme Court excluding Chief Justice of India as per the Supreme Court (Number of Judges) Amendment Act, 2019?

- Ans
- 1. Ten
 - 2. Thirty-Three
 - 3. Twenty-One
 - 4. Twenty-Eight

Question ID : 264330183153
 Option 1 ID : 264330718344
 Option 2 ID : 264330718347
 Option 3 ID : 264330718345
 Option 4 ID : 264330718346
 Status : Answered
 Chosen Option : 2

Q.41 'Shaka' is the Indian term used for the people called Scythians, who originally belonged to _____.

- Ans
- 1. central Asia
 - 2. south-western Asia
 - 3. south-eastern Asia
 - 4. eastern Asia

Question ID : 264330118961
 Option 1 ID : 264330466499
 Option 2 ID : 264330466502
 Option 3 ID : 264330466501
 Option 4 ID : 264330466500
 Status : Not Answered
 Chosen Option : --

Q.42 Who was the leader of the southern military campaign of Alauddin Khalji?

- Ans
- 1. Aadham Khan
 - 2. Mahmud Ganva
 - 3. Malik Kafur
 - 4. Malik Sarvar

Question ID : 264330114034
 Option 1 ID : 264330448223
 Option 2 ID : 264330448221
 Option 3 ID : 264330448224
 Option 4 ID : 264330448222
 Status : Answered
 Chosen Option : 3

Q.43 मुगल अधिकारी अमल-गुजार मुख्य रूप से _____ का कार्य करते थे।

- Ans
- 1. शाही उद्यान की बागवानी
 - 2. सैनिकों की भर्ती
 - 3. भू-राजस्व एकत्रित करने
 - 4. शाही परिवार को सुरक्षा प्रदान करने

Question ID : 264330119487
 Option 1 ID : 264330468232
 Option 2 ID : 264330468231
 Option 3 ID : 264330468234
 Option 4 ID : 264330468233
 Status : Not Answered
 Chosen Option : --

Q.44 साकेवा एक धार्मिक त्योहार है जो _____ के किरात खंबू राई समुदाय द्वारा मनाया जाता है।

- Ans
- 1. मध्य प्रदेश
 - 2. सिक्किम
 - 3. झारखंड
 - 4. पंजाब

Question ID : 264330106218
 Option 1 ID : 264330417173
 Option 2 ID : 264330417175
 Option 3 ID : 264330417174
 Option 4 ID : 264330417176
 Status : Not Answered
 Chosen Option : --

Q.45 Who among the following is known as the tabla maestro?

- Ans
- 1. Ustad Bismillah Khan
 - 2. Ghulam Ali
 - 3. Ustad Amjad Ali Khan
 - 4. Ustad Zakir Hussain

Question ID : 264330116425
 Option 1 ID : 264330457787
 Option 2 ID : 264330457788
 Option 3 ID : 264330457786
 Option 4 ID : 264330457785
 Status : Answered
 Chosen Option : 4

Q.46 A solution contains 50 g of sugar in 450 g of water. Calculate the concentration in terms of mass by mass percentage of the solution.

- Ans
- 1. 0.1%
 - 2. 10%
 - 3. 1%
 - 4. 0.01%

Question ID : 264330173643
 Option 1 ID : 264330681053
 Option 2 ID : 264330681051
 Option 3 ID : 264330681052
 Option 4 ID : 264330681054
 Status : Answered
 Chosen Option : 2

Q.47 Which special symbol is commonly used by geologists to describe the orientation of rock beds, faults, fractures, cuestas, igneous dikes and sills?

- Ans
- 1. Scale Indicator
 - 2. Average directional index
 - 3. Strike and dip
 - 4. Compass rose

Question ID : 264330131020
 Option 1 ID : 264330513191
 Option 2 ID : 264330513192
 Option 3 ID : 264330513193
 Option 4 ID : 264330513194
 Status : Answered
 Chosen Option : 3

Q.48 Which of the following dynasties arose as a result of Alexander's invasion?

- Ans
- 1. Maurya
 - 2. Pandya
 - 3. Chalukya
 - 4. Pallava

Question ID : 264330120134
 Option 1 ID : 264330470791
 Option 2 ID : 264330470792
 Option 3 ID : 264330470793
 Option 4 ID : 264330470794
 Status : Answered
 Chosen Option : 1

Q.49 The phenomenon of liquidity trap is based upon which of the following aspects of demand for money?

- Ans
- 1. Precautionary
 - 2. Velocity of circulation
 - 3. Transaction
 - 4. Speculative

Question ID : 264330111567
 Option 1 ID : 264330438354
 Option 2 ID : 264330438356
 Option 3 ID : 264330438353
 Option 4 ID : 264330438355
 Status : Not Answered
 Chosen Option : --

Q.50 The process of removing government-imposed limits or impediments is known as:

- Ans
- 1. liberalisation
 - 2. financial investments
 - 3. privatisation
 - 4. globalisation

Question ID : 264330110191
 Option 1 ID : 264330433044
 Option 2 ID : 264330433041
 Option 3 ID : 264330433042
 Option 4 ID : 264330433043
 Status : Answered
 Chosen Option : 1

Section : Reasoning

Q.1 Study the given pattern carefully and select the number that can replace the question mark (?) in it.

First row - 56, 16, 60
Second row - 64, 18, 68
Third row - 72, 20, ?

(NOTE : Operations should be performed on the whole numbers, without breaking down the numbers into its constituent digits. Eg. 13 – Operations on 13 such as adding /subtracting/multiplying etc. to 13 can be performed. Breaking down 13 into 1 and 3 and then performing mathematical operations on 1 and 3 is not allowed)

- Ans
- 1. 75
 - 2. 74
 - 3. 76
 - 4. 78

Question ID : 26433087330
Option 1 ID : 264330342957
Option 2 ID : 264330342958
Option 3 ID : 264330342960
Option 4 ID : 264330342959
Status : Answered
Chosen Option : 3

Q.2 Select the option that represents the letters that, when sequentially placed from left to right in the blanks below, will complete the letter series.

D _ A _ W _ S _ E W _ S A E _ D _ A E _

- Ans
- 1. SEDADWSW
 - 2. SEDADWES
 - 3. SEDADSSW
 - 4. SEADESW

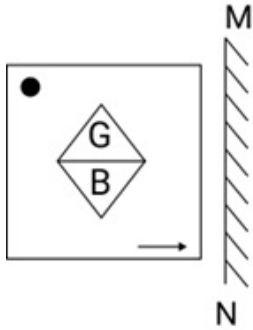
Question ID : 26433092540
Option 1 ID : 264330363450
Option 2 ID : 264330363452
Option 3 ID : 264330363451
Option 4 ID : 264330363449
Status : Answered
Chosen Option : 1

Q.3 Six students are sitting around a circular table facing the centre. Udit is an immediate neighbour of both Uday and Unnati. Umesh is sitting second to the right of Unnati. Utpal is sitting third to the left of Uday. Utsav is an immediate neighbour of both Umesh and Uday. Who is an immediate neighbour of both Umesh and Unnati?

- Ans
- 1. Utpal
 - 2. Uday
 - 3. Utsav
 - 4. Udit

Question ID : 264330110717
Option 1 ID : 264330435146
Option 2 ID : 264330435148
Option 3 ID : 264330435145
Option 4 ID : 264330435147
Status : Answered
Chosen Option : 1

Q.4 Select the correct mirror image of the given combination when the mirror is placed at 'MN' as shown below.



Ans

- ✗ 1.
- ✗ 2.
- ✗ 3.
- ✓ 4.



Question ID : 264330130769
 Option 1 ID : 264330512188
 Option 2 ID : 264330512189
 Option 3 ID : 264330512187
 Option 4 ID : 264330512190
 Status : Answered
 Chosen Option : 4

Q.5 Read the given statements and conclusions carefully. Assuming that the information given in the statements is true, even if it appears to be at variance with commonly known facts, decide which of the given conclusions logically follow(s) from the statements.

Statements:

Some stars are planets.

All stars are comets.

Conclusions:

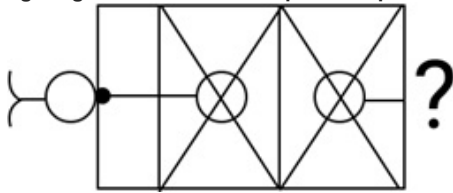
I. Some comets are planets.

II. Some planets are stars.

- Ans
- 1. Only conclusion I follows
 - 2. Only conclusion II follows
 - 3. Both conclusions I and II follow
 - 4. Neither conclusion I nor II follows

Question ID : 26433068294
 Option 1 ID : 264330267688
 Option 2 ID : 264330267689
 Option 3 ID : 264330267690
 Option 4 ID : 264330267691
 Status : Answered
 Chosen Option : 3

Q.6 Select the figure from the given options that will replace the question mark (?) in the figure given below and complete the pattern.



Ans

- 1.
- 2.
- 3.
- 4.

Question ID : 264330111713
 Option 1 ID : 264330438937
 Option 2 ID : 264330438940
 Option 3 ID : 264330438938
 Option 4 ID : 264330438939
 Status : Answered
 Chosen Option : 1

Q.7 Which figure should replace the question mark (?) in the following series to continue the pattern?

L O S T	8 S O L	L 8 T S	O T 8 L	?
8 □	□ T O	□ □	S	

Ans

✗ 1. 8 O T S
L □

✗ 2. L O T 8
S □

✓ 3. L O S T
8 □

✗ 4. L O T S
8 □

Question ID : 264330129615

Option 1 ID : 264330507828

Option 2 ID : 264330507826

Option 3 ID : 264330507827

Option 4 ID : 264330507829

Status : Answered

Chosen Option : 3

Q.8 14 is related to 27 following a certain logic. Following the same logic, 17 is related to 33. To which of the following is 24 related following the same logic?

Ans ✗ 1. 53

✓ 2. 47

✗ 3. 56

✗ 4. 50

Question ID : 264330178748

Option 1 ID : 264330701021

Option 2 ID : 264330701020

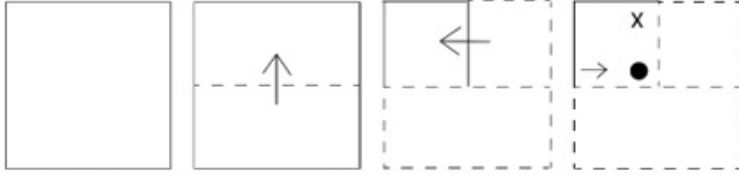
Option 3 ID : 264330701019

Option 4 ID : 264330701022

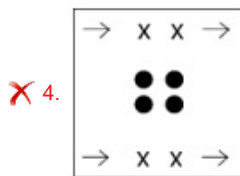
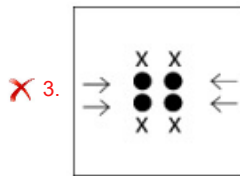
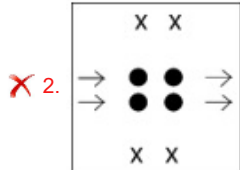
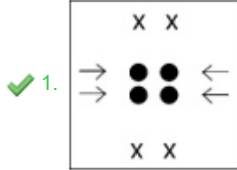
Status : Answered

Chosen Option : 2

Q.9 A paper is folded and cut as shown below. How will it appear when unfolded?

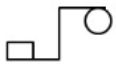


Ans



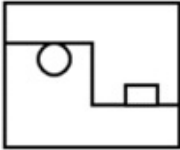
Question ID : 264330112988
 Option 1 ID : 264330444038
 Option 2 ID : 264330444040
 Option 3 ID : 264330444039
 Option 4 ID : 264330444037
 Status : Answered
 Chosen Option : 1

Q.10 Select the option in which the given figure is embedded (rotation is NOT allowed).

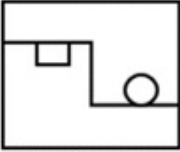


Ans

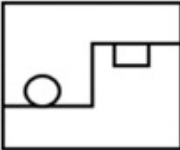
✗ 1.



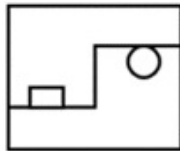
✗ 2.



✗ 3.



✓ 4.



Question ID : 264330101162

Option 1 ID : 264330397193


Option 2 ID : 264330397195

Option 3 ID : 264330397196

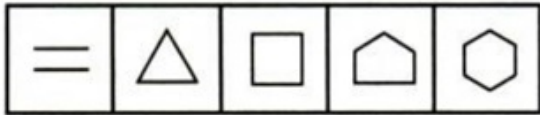
Option 4 ID : 264330397194

Status : Answered

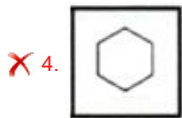
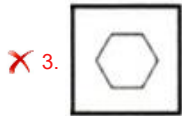
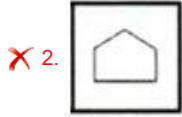
Chosen Option : 4



Q.11 Select the figure that will come next in the following figure series.



Ans



Question ID : 26433091695

Option 1 ID : 264330360148

Option 2 ID : 264330360145

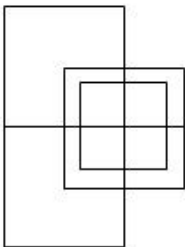
Option 3 ID : 264330360146

Option 4 ID : 264330360147

Status : Answered

Chosen Option : 1

Q.12 How many squares are there in the following figure?



Ans ✗ 1. 10

✓ 2. 12

✗ 3. 14

✗ 4. 15

Question ID : 26433076733

Option 1 ID : 264330300996

Option 2 ID : 264330300997

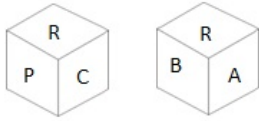
Option 3 ID : 264330300998

Option 4 ID : 264330300999

Status : Answered

Chosen Option : 2

Q.13 Six letters A, B, C, P, Q and R are written on different faces of a dice. Two positions of this dice are shown in the figure. Find the letter on the face opposite to C.



- Ans
- 1. B
 - 2. P
 - 3. A
 - 4. Q

Question ID : 264330109204
Option 1 ID : 264330429096
Option 2 ID : 264330429093
Option 3 ID : 264330429094
Option 4 ID : 264330429095
Status : Answered
Chosen Option : 3



Q.14 Which of the following option figures will complete the pattern in the figure given below?



Ans



Question ID : 26433080626

Option 1 ID : 264330316438

Option 2 ID : 264330316437

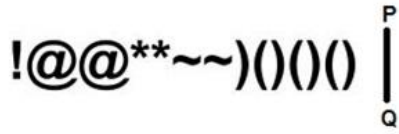
Option 3 ID : 264330316440

Option 4 ID : 264330316439

Status : Answered

Chosen Option : 2

Q.15 Select the correct mirror image of the given figure when the mirror is placed at PQ as shown below.



Ans

- ✗ 1.)()()~**@!
- ✗ 2. ()()(**@~!
- ✗ 3. ()()(**~@!
- ✓ 4. ()()(~**@!

Question ID : 26433082020
 Option 1 ID : 264330321914
 Option 2 ID : 264330321916
 Option 3 ID : 264330321915
 Option 4 ID : 264330321913
 Status : Answered
 Chosen Option : 4

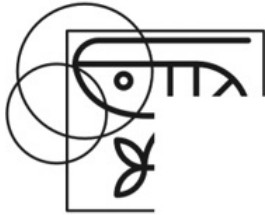
Q.16 Which two signs should be interchanged to make the given equation correct?
 $35 + 76 - 98 \div 3 \times 6 = 62$

- Ans
- ✓ 1. ÷ and ×
 - ✗ 2. = and ×
 - ✗ 3. + and ×
 - ✗ 4. - and +



Question ID : 26433090220
 Option 1 ID : 264330354359
 Option 2 ID : 264330354360
 Option 3 ID : 264330354358
 Option 4 ID : 264330354357
 Status : Answered
 Chosen Option : 1

Q.17 Which of the following option figures will complete the pattern in the figure given below?



Ans

X 1.



✓ 2.



X 3.



X 4.



Question ID : 26433080630

Option 1 ID : 264330316454

Option 2 ID : 264330316453

Option 3 ID : 264330316455

Option 4 ID : 264330316456

Status : Answered

Chosen Option : 2

Q.18 Which figure should replace the question mark (?) if the following series were to be continued?

X	S	S	D	D	S	S	↑	↑	S	
2		X		2		D		2		?
T	A	A	2	X	A	A	2	D	A	

Ans

✓ 1.

S	N
↑	
A	2

✗ 2.

S	2
↑	
A	D

✗ 3.

S	D
↑	
A	2

✗ 4.

S	N
A	
2	D



Question ID : 264330103897
 Option 1 ID : 264330407889
 Option 2 ID : 264330407890
 Option 3 ID : 264330407891
 Option 4 ID : 264330407892
 Status : Answered
 Chosen Option : 1

Q.19 Select the number from among the given options that can replace the question mark (?) in the following series.

3, 21, 57, 129, 273, ?

- Ans ✗ 1. 234
 ✓ 2. 561
 ✗ 3. 456
 ✗ 4. 345

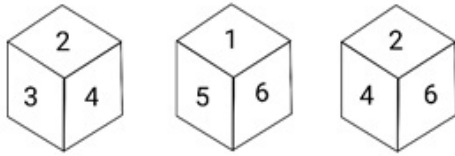
Question ID : 264330109768
 Option 1 ID : 264330431349
 Option 2 ID : 264330431352
 Option 3 ID : 264330431351
 Option 4 ID : 264330431350
 Status : Answered
 Chosen Option : 2

Q.20 In a code language, if MUSIC is coded as 13-21-19-9-3 and BAND is coded as 2-1-14-4, then how will HARMONIUM be coded?

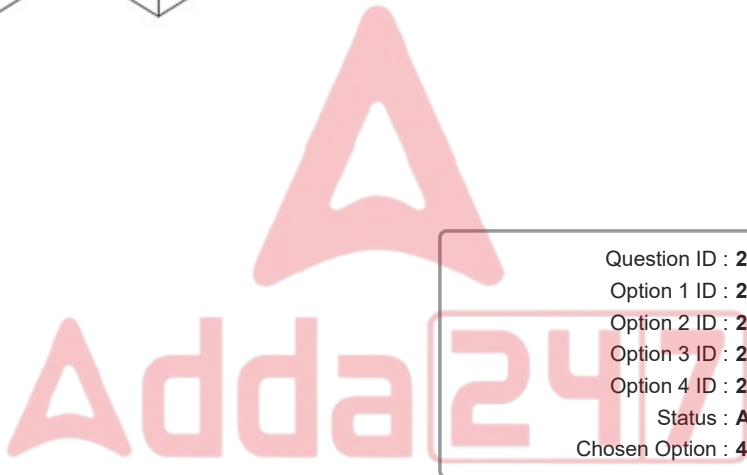
- Ans
- 1. 7-25-16-12-14-13-8-19-12
 - 2. 8-1-18-13-15-14-9-21-13
 - 3. 7-26-17-12-14-13-8-20-12
 - 4. 8-2-19-12-15-14-9-20-12

Question ID : 26433089481
 Option 1 ID : 264330351428
 Option 2 ID : 264330351426
 Option 3 ID : 264330351427
 Option 4 ID : 264330351425
 Status : Answered
 Chosen Option : 2

Q.21 Three different positions of the same dice are shown. Find the number on the face opposite the face showing '3'.



- Ans
- 1. 2
 - 2. 4
 - 3. 5
 - 4. 6



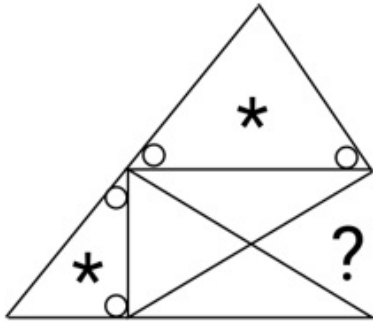
Question ID : 264330116955
 Option 1 ID : 264330459901
 Option 2 ID : 264330459902
 Option 3 ID : 264330459903
 Option 4 ID : 264330459904
 Status : Answered
 Chosen Option : 4

Q.22 Select the option that is related to the third word in the same way as the second word is related to the first word. (The words must be considered as meaningful English words and must NOT be related to each other based on the number of letters/number of consonants/vowels in the word)
 Norway: Oslo:: Iran:?

- Ans
- 1. Baghdad
 - 2. Moscow
 - 3. Tehran
 - 4. Madrid

Question ID : 26433069165
 Option 1 ID : 264330271173
 Option 2 ID : 264330271172
 Option 3 ID : 264330271174
 Option 4 ID : 264330271175
 Status : Answered
 Chosen Option : 3

Q.23 Select the figure from the given options that will replace the question mark (?) in the figure given below to complete the pattern.



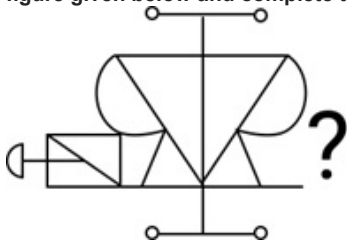
Ans

- ✗ 1.
- ✗ 2.
- ✗ 3.
- ✓ 4.



Question ID : 264330116610
 Option 1 ID : 264330458525
 Option 2 ID : 264330458527
 Option 3 ID : 264330458528
 Option 4 ID : 264330458526
 Status : Answered
 Chosen Option : 4

Q.24 Select the figure from the given options that will replace the question mark (?) in the figure given below and complete the pattern.



Ans

- ✓ 1.
- ✗ 2.
- ✗ 3.
- ✗ 4.

Question ID : 264330111716
 Option 1 ID : 264330438951
 Option 2 ID : 264330438950
 Option 3 ID : 264330438949
 Option 4 ID : 264330438952
 Status : Answered
 Chosen Option : 1

Q.25 If A denotes '+', B denotes '×', C denotes '-', and D denotes '÷', then what will come in place of '?' in the following equation?
 24 D (1 A 7) C 2 A 7 B 12 B (5 C 4) = ?

Ans

- ✗ 1. 96
- ✓ 2. 85
- ✗ 3. 88
- ✗ 4. 83

Question ID : 26433081676
 Option 1 ID : 264330320538
 Option 2 ID : 264330320540
 Option 3 ID : 264330320537
 Option 4 ID : 264330320539
 Status : Answered
 Chosen Option : 2

Section : Numerical Ability

Q.1 A certain sum is lent on simple interest at 4% p.a. for 3 years, 8% p.a. for the next 4 years, and 12% p.a. beyond 7 years. If for a period of 11 years, the simple interest obtained is ₹27,600, the sum is (in ₹):

Ans

- ✗ 1. 28,000
- ✗ 2. 25,000
- ✓ 3. 30,000
- ✗ 4. 32,000

Question ID : 264330119417
 Option 1 ID : 264330467955
 Option 2 ID : 264330467958
 Option 3 ID : 264330467957
 Option 4 ID : 264330467956
 Status : Answered
 Chosen Option : 3

Q.2 A sum of ₹66,550 is taken on loan. This is to be paid back in two equal instalments. If the rate of interest is 20% compounded annually, find the value of each instalment.

- Ans
- 1. ₹42,560
 - 2. ₹44,550
 - 3. ₹40,550
 - 4. ₹43,560

Question ID : 264330104313
 Option 1 ID : 264330409554
 Option 2 ID : 264330409556
 Option 3 ID : 264330409553
 Option 4 ID : 264330409555
 Status : Answered
 Chosen Option : 4

Q.3 The price of an item is to be increased by 25% in two years. This year, the price increased to ₹140 from ₹120. What is the percentage increase in the next year?

- Ans
- 1. 4.71%
 - 2. 4.17%
 - 3. 7.14%
 - 4. 7.41%

Question ID : 264330126101
 Option 1 ID : 264330494076
 Option 2 ID : 264330494077
 Option 3 ID : 264330494079
 Option 4 ID : 264330494078
 Status : Answered
 Chosen Option : 3

Q.4 What is the diameter of a sphere that has a surface area of $2500\pi \text{ cm}^2$?

- Ans
- 1. 40 cm
 - 2. 35 cm
 - 3. 50 cm
 - 4. 25 cm

Question ID : 264330111491
 Option 1 ID : 264330438051
 Option 2 ID : 264330438050
 Option 3 ID : 264330438052
 Option 4 ID : 264330438049
 Status : Answered
 Chosen Option : 3

Q.5 The price of an article has been reduced by 20%. In order to restore the original price, the new price must be increased by:

- Ans
- 1. 25%
 - 2. 20%
 - 3. 22%
 - 4. 28%

Question ID : 264330104160
 Option 1 ID : 264330408943
 Option 2 ID : 264330408941
 Option 3 ID : 264330408942
 Option 4 ID : 264330408944
 Status : Answered
 Chosen Option : 1

Q.6 Which of the following is the smallest ratio?

- Ans 1. 15 : 20
 2. 7 : 21
 3. 21 : 25
 4. 17 : 25

Question ID : 264330119337
Option 1 ID : 264330467636
Option 2 ID : 264330467635
Option 3 ID : 264330467637
Option 4 ID : 264330467638
Status : Answered
Chosen Option : 2

Q.7 If Malay buys guavas at ₹300 per kg and sells them at ₹25 per 100 gm., then he will have (rounded off to 2 decimal places):

- Ans 1. a loss of 16.67%
 2. a profit of 25.25%
 3. a loss of 25.25%
 4. a profit of 16.67%

Question ID : 264330112427
Option 1 ID : 264330441794
Option 2 ID : 264330441795
Option 3 ID : 264330441796
Option 4 ID : 264330441793
Status : Answered
Chosen Option : 1

Q.8 If 25 people, working 15 hours a day, can complete 5 units of work in 8 days, then how many days will be required by 12 people to complete 10 units of work, working 20 hours a day?

- Ans 1. 25 days
 2. 24 days
 3. 20 days
 4. 22 days

Question ID : 264330182576
Option 1 ID : 264330716098
Option 2 ID : 264330716097
Option 3 ID : 264330716095
Option 4 ID : 264330716096
Status : Answered
Chosen Option : 1

Q.9 If a solid sphere of radius 20 cm is moulded into 8 solid spherical balls of equal radius, then the radius of each ball will be: (Where $\pi = \frac{22}{7}$)

- Ans 1. 10 cm
 2. 12.5 cm
 3. 11.5 cm
 4. 11 cm

Question ID : 264330118139
Option 1 ID : 264330464372
Option 2 ID : 264330464374
Option 3 ID : 264330464371
Option 4 ID : 264330464373
Status : Answered
Chosen Option : 1

Q.10 Meera made a profit of 5% by selling a bag after offering a discount of 10%. If the marked price of bag is ₹1,050, find its cost price.

- Ans 1. ₹850
 2. ₹900
 3. ₹508
 4. ₹1,000

Question ID : 264330118127
Option 1 ID : 264330464323
Option 2 ID : 264330464325
Option 3 ID : 264330464326
Option 4 ID : 264330464324
Status : Answered
Chosen Option : 2

Q.11 What is the sum of the square of the prime numbers between 20 and 30?

- Ans 1. 1500
 2. 1370
 3. 1290
 4. 1276

Question ID : 264330104347
Option 1 ID : 264330409690
Option 2 ID : 264330409692
Option 3 ID : 264330409689
Option 4 ID : 264330409691
Status : Answered
Chosen Option : 2

Q.12 The average of $1^2, 2^2, 3^2, 4^2, 5^2, 6^2, 7^2, 8^2$ and 9^2 is:

- Ans
- ✓ 1. $31\frac{2}{3}$
 - ✗ 2. $32\frac{1}{3}$
 - ✗ 3. $34\frac{2}{3}$
 - ✗ 4. $33\frac{1}{3}$

Question ID : 264330126169
 Option 1 ID : 264330494349
 Option 2 ID : 264330494350
 Option 3 ID : 264330494351
 Option 4 ID : 264330494348
 Status : Answered
 Chosen Option : 1

Q.13 What will be the least common multiple of four numbers 15, 35, 42 and 72?

- Ans
- ✗ 1. 2550
 - ✗ 2. 2050
 - ✓ 3. 2520
 - ✗ 4. 2025

Question ID : 264330103916
 Option 1 ID : 264330407966
 Option 2 ID : 264330407968
 Option 3 ID : 264330407967
 Option 4 ID : 264330407965
 Status : Answered
 Chosen Option : 3

Q.14 A train approaches a tunnel MN. Inside the tunnel is a dog located at a point that is $\frac{2}{5}$ of the distance MN measured from the entrance M. When the train whistles, the dog runs. If the dog moves towards the entrance of the tunnel M, the train catches the dog exactly at the entrance M. If the dog moves towards the exit N, the train catches the dog exactly at the exit N. Find the ratio of the speed of the dog to that of the train?

- Ans
- ✗ 1. 5 : 1
 - ✗ 2. 2 : 1
 - ✗ 3. 1 : 2
 - ✓ 4. 1 : 5

Question ID : 264330106349
 Option 1 ID : 264330417697
 Option 2 ID : 264330417700
 Option 3 ID : 264330417699
 Option 4 ID : 264330417698
 Status : Answered
 Chosen Option : 4

Q.15 The highest common factor (HCF) of 256, 136 and 436 is _____.

- Ans
- 1. 2
 - 2. 4
 - 3. 8
 - 4. 12

Question ID : 264330112056
Option 1 ID : 264330440309
Option 2 ID : 264330440310
Option 3 ID : 264330440311
Option 4 ID : 264330440312
Status : Answered
Chosen Option : 2

Section : Computer Proficiency

Q.1 Which text alignment option in Microsoft Word 365 aligns text along the left margin?

- Ans
- 1. Center Align
 - 2. Left Align
 - 3. Right Align
 - 4. Justify

Question ID : 264330180729
Option 1 ID : 264330708885
Option 2 ID : 264330708883
Option 3 ID : 264330708884
Option 4 ID : 264330708886
Status : Answered
Chosen Option : 2

Q.2 What action should be taken to add a new row or column in a spreadsheet?

- Ans
- 1. Right-click on an existing row or column and select 'Insert' from the context menu.
 - 2. Use the 'Find and Replace' function to search for a specific cell, and then insert a new row or column using the results.
 - 3. Highlight a range of cells, right-click, and choose 'Delete' from the context menu to create space for the new row or column.
 - 4. Select a row or column, press the 'Ctrl+X' keyboard shortcut to cut it, and then press 'Ctrl+V' to paste it in the desired location.

Question ID : 264330173327
Option 1 ID : 264330679787
Option 2 ID : 264330679790
Option 3 ID : 264330679789
Option 4 ID : 264330679788
Status : Answered
Chosen Option : 1

Q.3 In Microsoft Excel 365, which tool should we use for creating or editing formulas in a worksheet?

- Ans
- 1. Formula bar
 - 2. Watch window
 - 3. Precedents
 - 4. Auditing toolbar

Question ID : 264330182055
Option 1 ID : 264330714059
Option 2 ID : 264330714062
Option 3 ID : 264330714060
Option 4 ID : 264330714061
Status : Answered
Chosen Option : 1

Q.4 In which of the following tabs in MS Word 365 is Bullets and Numbering present?

- Ans
- 1. Page layout
 - 2. Home
 - 3. Edit
 - 4. File

Question ID : 264330180419
Option 1 ID : 264330707646
Option 2 ID : 264330707644
Option 3 ID : 264330707645
Option 4 ID : 264330707643
Status : Answered
Chosen Option : 1

Q.5 What is the purpose of the CC field in an email?

- Ans
- 1. To include additional recipients who should be kept informed
 - 2. To request a read receipt from the recipient
 - 3. To encrypt the email for added security
 - 4. To indicate that the email is of high importance

Question ID : 264330174461
Option 1 ID : 264330684263
Option 2 ID : 264330684265
Option 3 ID : 264330684266
Option 4 ID : 264330684264
Status : Answered
Chosen Option : 1

Q.6 Which of the following shortcut key is used to insert a hyperlink in MS Word 365?

- Ans
- 1. Shift + H
 - 2. Ctrl + K
 - 3. Ctrl + H
 - 4. Shift + K

Question ID : 264330178571
Option 1 ID : 264330700314
Option 2 ID : 264330700311
Option 3 ID : 264330700312
Option 4 ID : 264330700313
Status : Answered
Chosen Option : 2

Q.7 What does the following icon resemble in MS Word 365 ?



- Ans
- 1. Justifying
 - 2. Right alignment
 - 3. Centre of text
 - 4. Left alignment

Question ID : 264330180451
Option 1 ID : 264330707774
Option 2 ID : 264330707771
Option 3 ID : 264330707773
Option 4 ID : 264330707772
Status : Answered
Chosen Option : 2

Q.8 What does the 'Orientation' option in the Page Setup menu in Microsoft Word 365 allow you to change?

- Ans
- 1. Text alignment
 - 2. Page layout (portrait or landscape)
 - 3. Font style
 - 4. Page size

Question ID : 264330180721
Option 1 ID : 264330708853
Option 2 ID : 264330708854
Option 3 ID : 264330708851
Option 4 ID : 264330708852
Status : Answered
Chosen Option : 2

Q.9 Which of the following is a private network that is typically open to external parties, such as business partners, suppliers, and key customers?

- Ans
- 1. Telnet
 - 2. Extranet
 - 3. Intranet
 - 4. Internet

Question ID : 264330178246
Option 1 ID : 264330699042
Option 2 ID : 264330699041
Option 3 ID : 264330699039
Option 4 ID : 264330699040
Status : Answered
Chosen Option : 1

Q.10 Which of the following is the correct way to sort a range of cells in ascending order in MS Excel 365?

- Ans
- 1. Select the range of cells and press 'Ctrl + Shift + S'.
 - 2. Click on the 'Review' tab and select 'Sort'.
 - 3. Click on the 'OK' button.
 - 4. In the 'Sort' dialog box, select the 'Ascending' option in the 'Order' section.

Question ID : 264330178564

Option 1 ID : 264330700283

Option 2 ID : 264330700284

Option 3 ID : 264330700286

Option 4 ID : 264330700285

Status : Answered

Chosen Option : 4

