

Delhi Police Constable (Exe)

Previous Year Paper
14 Nov, 2023 Shift 3



Test Prime

**ALL EXAMS,
ONE SUBSCRIPTION**



70,000+
Mock Tests



**Personalised
Report Card**



**Unlimited
Re-Attempt**



600+
Exam Covered



**Previous Year
Papers**



500%
Refund



ATTEMPT FREE MOCK NOW

Constable Executive Male and Female in Delhi Police Examination 2023

Roll Number	
Candidate Name	
Venue Name	
Exam Date	14/11/2023
Exam Time	3:00 PM - 4:30 PM
Subject	Constable Executive Male and Female in Delhi Police Examination 2023

Section : **General Knowledge****Q.1** Cashpor Micro credit is a company that does NOT operate in the most backward districts of _____.

- Ans
- 1. Bihar
 - 2. Chhattisgarh
 - 3. Telangana
 - 4. Jharkhand

Question ID : 264330116497
 Option 1 ID : 264330458073
 Option 2 ID : 264330458076
 Option 3 ID : 264330458075
 Option 4 ID : 264330458074

Status : **Not Answered**

Chosen Option : --

Q.2 Which Article of the Constitution of India states that the President shall appoint judges of the Supreme Court under his hand and seal after consultation with such of the judges of the Supreme Court as the President may deem necessary?

- Ans
- 1. Article 124 (2)
 - 2. Article 120 (2)
 - 3. Article 134 (2)
 - 4. Article 142(2)

Question ID : 264330110826
 Option 1 ID : 264330435584
 Option 2 ID : 264330435582
 Option 3 ID : 264330435581
 Option 4 ID : 264330435583

Status : **Answered**

Chosen Option : 1

Q.3 Which of the following was replaced by the Green Revolution?

- Ans
- 1. Use of inorganic manures
 - 2. Use of seeds supplied by the government
 - 3. Use of groundwater for irrigation
 - 4. Use of organic manures

Question ID : 264330111765
 Option 1 ID : 264330439146
 Option 2 ID : 264330439148
 Option 3 ID : 264330439147
 Option 4 ID : 264330439145

Status : **Answered**

Chosen Option : 4

Q.4 According to Census of India 2011, the growth rate of Hindu population in the decade 2001-2011 was _____.

- Ans
- 1. 10.0%
 - 2. 16.8%
 - 3. 20.1%
 - 4. 8.6%

Question ID : 264330179510
 Option 1 ID : 264330704039
 Option 2 ID : 264330704040
 Option 3 ID : 264330704041
 Option 4 ID : 264330704042
 Status : Not Answered
 Chosen Option : --

Q.5 In which of the following years Cripps Mission offered Dominion Status to India?

- Ans
- 1. 1942
 - 2. 1934
 - 3. 1939
 - 4. 1945

Question ID : 264330118600
 Option 1 ID : 264330465651
 Option 2 ID : 264330465654
 Option 3 ID : 264330465653
 Option 4 ID : 264330465652
 Status : Answered
 Chosen Option : 1

Q.6 किस सिंड्रोम के कारण कंधों के बीच एक मोटा कूबड़, एक गोल चेहरा और त्वचा पर गुलाबी या बैंगनी खिंचाव के निशान हो जाते हैं?

- Ans
- 1. डाउन सिंड्रोम (Down syndrome)
 - 2. एंजेलमैन सिंड्रोम (Angelman syndrome)
 - 3. कुशिंग सिंड्रोम (Cushing syndrome)
 - 4. मार्फन सिंड्रोम (Marfan syndrome)

Question ID : 264330130986
 Option 1 ID : 264330513056
 Option 2 ID : 264330513055
 Option 3 ID : 264330513057
 Option 4 ID : 264330513058
 Status : Not Answered
 Chosen Option : --

Q.7 After independence, who had complete control over the established industries?

- Ans
- 1. Private sector
 - 2. Foreign investors
 - 3. Britishers
 - 4. Government

Question ID : 264330174149
 Option 1 ID : 264330683038
 Option 2 ID : 264330683036
 Option 3 ID : 264330683035
 Option 4 ID : 264330683037
 Status : Answered
 Chosen Option : 4

Q.8 Who propounded the philosophy of 'One Caste, One Religion, One God for all men'?

- Ans 1. Shree Narayana Guru
 2. Savitribai Phule
 3. Mahatma Gandhi
 4. Raja Ram Mohan Roy

Question ID : 264330114882
 Option 1 ID : 264330451614
 Option 2 ID : 264330451615
 Option 3 ID : 264330451613
 Option 4 ID : 264330451616
 Status : Not Answered
 Chosen Option : --

Q.9 What type of earthquake occurs when induced stresses around mine workings cause massive rocks to fly explosively from the mine face, creating seismic waves?

- Ans 1. Collapse earthquake
 2. Explosion earthquake
 3. Volcanic earthquake
 4. Tectonic earthquake

Question ID : 264330141510
 Option 1 ID : 264330554377
 Option 2 ID : 264330554376
 Option 3 ID : 264330554378
 Option 4 ID : 264330554375
 Status : Answered
 Chosen Option : 2

Q.10 The term 'monsoon' denotes the seasonal change in wind direction that occurs during which specific time period?

- Ans 1. Two decades
 2. Two months
 3. One day
 4. Year

Question ID : 264330174344
 Option 1 ID : 264330683798
 Option 2 ID : 264330683797
 Option 3 ID : 264330683795
 Option 4 ID : 264330683796
 Status : Answered
 Chosen Option : 2

Q.11 Sunlight is the main source of _____.

- Ans 1. Vitamin A
 2. Vitamin B
 3. Vitamin D
 4. Vitamin C

Question ID : 264330120064
 Option 1 ID : 264330470511
 Option 2 ID : 264330470514
 Option 3 ID : 264330470512
 Option 4 ID : 264330470513
 Status : Answered
 Chosen Option : 3

Q.12 In which of the following dance genres is Mallika Sarabhai an accomplished dancer?

- Ans
- 1. Kathakali and Odissi
 - 2. Odissi and Kuchipudi
 - 3. Bharatnatyam and Odissi
 - 4. Kuchipudi and Bharatnatyam

Question ID : 264330113797
Option 1 ID : 264330447276
Option 2 ID : 264330447273
Option 3 ID : 264330447274
Option 4 ID : 264330447275
Status : Answered
Chosen Option : 3

Q.13 In which of the following Indian states is Ghum Monastery located?

- Ans
- 1. Karnataka
 - 2. Himachal Pradesh
 - 3. West Bengal
 - 4. Arunachal Pradesh

Question ID : 264330109635
Option 1 ID : 264330430817
Option 2 ID : 264330430819
Option 3 ID : 264330430818
Option 4 ID : 264330430820
Status : Not Answered
Chosen Option : --

Q.14 In which language was the largest newspaper published in India in the year 2021-22?

- Ans
- 1. Hindi
 - 2. English
 - 3. Urdu
 - 4. Bengali

Question ID : 264330181434
Option 1 ID : 264330711660
Option 2 ID : 264330711659
Option 3 ID : 264330711661
Option 4 ID : 264330711662
Status : Not Answered
Chosen Option : --

Q.15 Which of the following statements is correct about privatisation?

Statements:

- I. It promotes economic efficiency
- II. It delimits the interference of bureaucracy
- III. It leads to market failure

- Ans 1. Only statements I and II
2. Only statement II
3. Only statement III
4. Only statement I

Question ID : 26433066581
 Option 1 ID : 264330260850
 Option 2 ID : 264330260849
 Option 3 ID : 264330260851
 Option 4 ID : 264330260848
 Status : Answered
 Chosen Option : 4

Q.16 'नागे वाज़ा' जूडो में इस्तेमाल की जाने वाली एक _____ की तकनीक है।

- Ans 1. दम घुटाने (चोकिंग)
2. जकड़ने (ग्रीपिंग)
3. दूर हटाने (थ्रोइंग)
4. पकड़े रखने (होल्डिंग)

Question ID : 264330118481
 Option 1 ID : 264330465328
 Option 2 ID : 264330465325
 Option 3 ID : 264330465326
 Option 4 ID : 264330465327
 Status : Not Answered
 Chosen Option : --

Q.17 In which budget was the policy of LERMS announced?

- Ans 1. 1991-92
2. 1992-93
3. 1995-96
4. 1990-91

Question ID : 264330109418
 Option 1 ID : 264330429950
 Option 2 ID : 264330429951
 Option 3 ID : 264330429952
 Option 4 ID : 264330429949
 Status : Not Answered
 Chosen Option : --

Q.18 In the context of globalisation, what does PPP stand for?

- Ans
- 1. Purchase Power Parity
 - 2. Purchasing Par Parity
 - 3. Purchasing Power Parity
 - 4. Purchasing Par Parities

Question ID : 264330109581
 Option 1 ID : 264330430602
 Option 2 ID : 264330430603
 Option 3 ID : 264330430601
 Option 4 ID : 264330430604
 Status : Answered
 Chosen Option : 3

Q.19 _____ is the final interpreter of the Constitution of India.

- Ans
- 1. Attorney General
 - 2. Comptroller and Auditor General
 - 3. Supreme Court
 - 4. President of India

Question ID : 264330134562
 Option 1 ID : 264330527204
 Option 2 ID : 264330527203
 Option 3 ID : 264330527205
 Option 4 ID : 264330527206
 Status : Answered
 Chosen Option : 1

Q.20 Ram Sahay Pandey, a Padma Shri 2022 awardee, is associated with which of the following dance forms of the Bedia community of Madhya Pradesh?

- Ans
- 1. Karma
 - 2. Ravala
 - 3. Rai
 - 4. Badhai

Question ID : 26433071519
 Option 1 ID : 264330280503
 Option 2 ID : 264330280502
 Option 3 ID : 264330280501
 Option 4 ID : 264330280500
 Status : Not Answered
 Chosen Option : --

Q.21 Which of the following measures of credit control requires a well-developed money market?

- Ans
- 1. Open market operations
 - 2. Bank rate policy
 - 3. Variable reserve ratio
 - 4. Qualitative measures

Question ID : 264330112465
 Option 1 ID : 264330441945
 Option 2 ID : 264330441946
 Option 3 ID : 264330441947
 Option 4 ID : 264330441948
 Status : Not Answered
 Chosen Option : --

Q.22 Which of the following festivals is celebrated in honour of Hidimba Devi in Himachal Pradesh?

- Ans
- 1. Shorai Festival
 - 2. Maghi Festival
 - 3. Bisua Festival
 - 4. Doongri Festival

Question ID : 264330141782
Option 1 ID : 264330555450
Option 2 ID : 264330555449
Option 3 ID : 264330555448
Option 4 ID : 264330555447
Status : Answered
Chosen Option : 2

Q.23 Vijayadashami is also known as _____.

- Ans
- 1. Dussehra
 - 2. Holi
 - 3. Diwali
 - 4. Ganesh Chaturthi

Question ID : 264330109311
Option 1 ID : 264330429523
Option 2 ID : 264330429521
Option 3 ID : 264330429522
Option 4 ID : 264330429524
Status : Answered
Chosen Option : 1

Q.24 Who among the following social reformers established Satyashodhak Samaj?

- Ans
- 1. Jyotiba Phule
 - 2. Narayana Guru
 - 3. Ramaswami Naicker-Periyar
 - 4. Dr. Babasaheb Ambedkar

Question ID : 264330113595
Option 1 ID : 264330446465
Option 2 ID : 264330446467
Option 3 ID : 264330446468
Option 4 ID : 264330446466
Status : Answered
Chosen Option : 1

Q.25 Mein Kampf' has been written by which of the following politicians?

- Ans
- 1. Benito Mussolini
 - 2. Hirohito
 - 3. Adolf Hitler
 - 4. Clement Attlee

Question ID : 26433071507
Option 1 ID : 264330280452
Option 2 ID : 264330280454
Option 3 ID : 264330280453
Option 4 ID : 264330280455
Status : Not Answered
Chosen Option : --

Q.26 Pandit Ayodhya Prasad is associated with _____ .

- Ans 1. pakhawaj
 2. veena
 3. flute
 4. guitar

Question ID : 26433011936
Option 1 ID : 264330439830
Option 2 ID : 264330439829
Option 3 ID : 264330439831
Option 4 ID : 264330439832
Status : Not Answered
Chosen Option : --

Q.27 High Courts have the power to issue writs under which Article of the Constitution of India?

- Ans 1. Article 222
 2. Article 223
 3. Article 226
 4. Article 225

Question ID : 264330110578
Option 1 ID : 264330434592
Option 2 ID : 264330434590
Option 3 ID : 264330434591
Option 4 ID : 264330434589
Status : Answered
Chosen Option : 3

Q.28 Ashvaghosha, the author of Buddhacharita, was the philosopher in the court of which Kushana kings?

- Ans 1. Kanishka I
 2. Vasudeva I
 3. Huvishka
 4. Vima Kadphises

Question ID : 264330120419
Option 1 ID : 264330471927
Option 2 ID : 264330471930
Option 3 ID : 264330471929
Option 4 ID : 264330471928
Status : Answered
Chosen Option : 1

Q.29 Match List I (name of the periodic element) with List II (symbols of the periodic element) and select the correct code.

List I	List II
A. Magnesium	i. Mn
B. Boron	ii. B
C. Manganese	iii. Ba
D. Barium	iv. Mg

Code:	A	B	C	D
I	iv	iii	i	ii
II	i	ii	iv	iii
III	iv	i	ii	iii
IV	iv	ii	i	iii

- Ans**
- 1. III
 - 2. I
 - 3. II
 - 4. IV

Question ID : 264330173658
 Option 1 ID : 264330681113
 Option 2 ID : 264330681111
 Option 3 ID : 264330681112
 Option 4 ID : 264330681114
 Status : Answered
 Chosen Option : 4

Q.30 Name the Freedom fighter who formed a clan of non-violent revolutionaries called Khudai Khidmatgars in 1929.

- Ans**
- 1. KM Ashraf
 - 2. Khan Abdul Ghaffar Khan
 - 3. Abbas Tayabji
 - 4. Mohammed Yasin Khan

Question ID : 264330171708
 Option 1 ID : 264330673437
 Option 2 ID : 264330673438
 Option 3 ID : 264330673435
 Option 4 ID : 264330673436
 Status : Answered
 Chosen Option : 2

Q.31 The National Sports Festival for Women was started in ____.

- Ans**
- 1. 1974
 - 2. 1975
 - 3. 1976
 - 4. 1970

Question ID : 264330110368
 Option 1 ID : 264330433750
 Option 2 ID : 264330433751
 Option 3 ID : 264330433752
 Option 4 ID : 264330433749
 Status : Not Answered
 Chosen Option : --

Q.32 Which of the following states topped the medal tally in the Khelo India Youth Games 2023?

- Ans 1. Maharashtra
 2. Haryana
 3. Uttar Pradesh
 4. Punjab

Question ID : 264330176920
Option 1 ID : 264330693875
Option 2 ID : 264330693876
Option 3 ID : 264330693878
Option 4 ID : 264330693877
Status : Answered
Chosen Option : 1

Q.33 National Food Security Mission was launched in India in the year 2007-08 to increase the production of rice, wheat and _____.

- Ans 1. saffron
 2. millet
 3. pulses
 4. fruits

Question ID : 264330183060
Option 1 ID : 264330717975
Option 2 ID : 264330717974
Option 3 ID : 264330717972
Option 4 ID : 264330717973
Status : Answered
Chosen Option : 2

Q.34 The autobiography 'Long Walk to Freedom' is written by:

- Ans 1. Nelson Mandela
 2. BR Ambedkar
 3. Rabindranath Tagore
 4. MK Gandhi

Question ID : 26433072941
Option 1 ID : 264330285958
Option 2 ID : 264330285956
Option 3 ID : 264330285959
Option 4 ID : 264330285957
Status : Answered
Chosen Option : 1

Q.35 Which of the following options had figured in the royal emblem of the Chola dynasty?

- Ans 1. Tiger
 2. Elephant
 3. Fish
 4. Horse

Question ID : 264330118981
Option 1 ID : 264330466580
Option 2 ID : 264330466581
Option 3 ID : 264330466579
Option 4 ID : 264330466582
Status : Answered
Chosen Option : 3

Q.36 Which Indian state has got the highest literacy rate as per National Survey of India 2022?

- Ans
- 1. Goa
 - 2. Maharashtra
 - 3. Kerala
 - 4. Karnataka

Question ID : 264330177909
Option 1 ID : 264330697724
Option 2 ID : 264330697725
Option 3 ID : 264330697723
Option 4 ID : 264330697726
Status : Answered
Chosen Option : 3

Q.37 According to Sangam texts, the term uzhavar means:

- Ans
- 1. slaves
 - 2. large landowners
 - 3. teachers
 - 4. ordinary ploughmen

Question ID : 264330119473
Option 1 ID : 264330468177
Option 2 ID : 264330468178
Option 3 ID : 264330468175
Option 4 ID : 264330468176
Status : Not Answered
Chosen Option : --

Q.38 The famous festival known as 'Paro Tschechu' is associated with which country?

- Ans
- 1. Japan
 - 2. Burma
 - 3. Bhutan
 - 4. Thailand

Question ID : 264330182980
Option 1 ID : 264330717652
Option 2 ID : 264330717653
Option 3 ID : 264330717654
Option 4 ID : 264330717655
Status : Not Answered
Chosen Option : --

Q.39 Which Article of the Constitution of India empowers a High Court to issue writs?

- Ans
- 1. Article 230
 - 2. Article 220
 - 3. Article 223
 - 4. Article 226

Question ID : 264330177763
Option 1 ID : 264330697162
Option 2 ID : 264330697159
Option 3 ID : 264330697160
Option 4 ID : 264330697161
Status : Answered
Chosen Option : 4

Q.40 Under which Constitutional Amendment Act, was the term "Secular" added in the Preamble?

- Ans
- 1. 43rd Constitutional Amendment Act
 - 2. 44th Constitutional Amendment Act
 - 3. 41st Constitutional Amendment Act
 - 4. 42nd Constitutional Amendment Act

Question ID : 264330114481
Option 1 ID : 264330450011
Option 2 ID : 264330450012
Option 3 ID : 264330450009
Option 4 ID : 264330450010
Status : Answered
Chosen Option : 4

Q.41 Khandesh was incorporated into the Mughal empire in which of the following years?

- Ans
- 1. 1601
 - 2. 1603
 - 3. 1598
 - 4. 1600

Question ID : 264330171693
Option 1 ID : 264330673377
Option 2 ID : 264330673378
Option 3 ID : 264330673375
Option 4 ID : 264330673376
Status : Answered
Chosen Option : 2

Q.42 Which place in the north-eastern part of the northern Indian state of Himachal Pradesh is popularly known as the Cold Desert Mountains?

- Ans
- 1. Sangti Valley
 - 2. Parvati Valley
 - 3. Aalo Valley
 - 4. Spiti Valley

Question ID : 264330131014
Option 1 ID : 264330513168
Option 2 ID : 264330513169
Option 3 ID : 264330513167
Option 4 ID : 264330513170
Status : Not Answered
Chosen Option : --

Q.43 Select the personality who received the Sangeet Natak Akademi 2021 award for his/her contribution in Mohiniyattam.

- Ans
- 1. Thokchom Ibemubi Devi
 - 2. Bhuvan Kumar
 - 3. Neena Prasad
 - 4. Bijay Kumar Jena

Question ID : 264330130528
Option 1 ID : 264330511225
Option 2 ID : 264330511223
Option 3 ID : 264330511224
Option 4 ID : 264330511226
Status : Answered
Chosen Option : 3

Q.44 From which of the following countries did India adopt the 'amendment procedure in the constitution'?

- Ans 1. South Africa
 2. Ireland
 3. The US
 4. France

Question ID : 264330133044
Option 1 ID : 264330521230
Option 2 ID : 264330521227
Option 3 ID : 264330521228
Option 4 ID : 264330521229
Status : Answered
Chosen Option : 1

Q.45 The Dronacharya award is given to _____.

- Ans 1. best coach
 2. best player
 3. best teacher
 4. best soldier

Question ID : 264330110389
Option 1 ID : 264330433834
Option 2 ID : 264330433833
Option 3 ID : 264330433835
Option 4 ID : 264330433836
Status : Answered
Chosen Option : 1

Q.46 Pandit Hariprasad Chaurasia is a world-renowned exponent of the _____.

- Ans 1. Sarod
 2. Sitar
 3. Bansuri
 4. tabla

Question ID : 264330116420
Option 1 ID : 264330457767
Option 2 ID : 264330457768
Option 3 ID : 264330457765
Option 4 ID : 264330457766
Status : Answered
Chosen Option : 4

Q.47 In the Lok Sabha, _____ seats are reserved for the members from Scheduled Castes.

- Ans 1. 80
 2. 82
 3. 73
 4. 84

Question ID : 264330139438
Option 1 ID : 264330546185
Option 2 ID : 264330546184
Option 3 ID : 264330546183
Option 4 ID : 264330546186
Status : Not Answered
Chosen Option : --

Q.48 Below are some statements about the Ozone layer.
 Statement 1. It is found in the stratosphere.
 Statement 2. Chlorofluorocarbons (CFCs) are responsible for Ozone hole.
 Statement 3. Ozone layer is found around 15–30 km above the earth's surface.
 Statement 4. Ozone layer is expected not to recover anymore now.
 Which of these statements are correct?

- Ans**
- 1. Only statements 2, 3 and 4
 - 2. Only statements 3 and 4
 - 3. Only statements 1, 2 and 3
 - 4. Only statements 1 and 2

Question ID : 264330131802
 Option 1 ID : 264330516310
 Option 2 ID : 264330516309
 Option 3 ID : 264330516307
 Option 4 ID : 264330516308
 Status : Answered
 Chosen Option : 3

Q.49 The Sun Temple of Konark is located on the shore of the _____.

- Ans**
- 1. Bay of Bengal
 - 2. Indian Ocean
 - 3. Red Sea
 - 4. Arabian Sea

Question ID : 264330109649
 Option 1 ID : 264330430874
 Option 2 ID : 264330430873
 Option 3 ID : 264330430876
 Option 4 ID : 264330430875
 Status : Answered
 Chosen Option : 1

Q.50 Hojagiri is a famous dance form of which of these states?

- Ans**
- 1. Punjab
 - 2. Jharkhand
 - 3. Assam
 - 4. Tripura

Question ID : 264330109286
 Option 1 ID : 264330429421
 Option 2 ID : 264330429424
 Option 3 ID : 264330429422
 Option 4 ID : 264330429423
 Status : Not Answered
 Chosen Option : --

Q.1 Two statements are given followed by two conclusions numbered I and II. Assuming the statements to be true, even if they seem to be at variance from commonly known facts, decide which of the conclusions logically follow(s) from the statements.

Statements:

All Shirts are Cottons.

Some Shirts are Nets.

Conclusions:

I. All Nets are Shirts.

II. Some Nets are Cottons.

- Ans
- 1. Both conclusions I and II follow.
 - 2. Only conclusion II follows.
 - 3. Neither conclusion I nor II follows.
 - 4. Only conclusion I follows.

Question ID : 26433076595

Option 1 ID : 264330300446

Option 2 ID : 264330300445

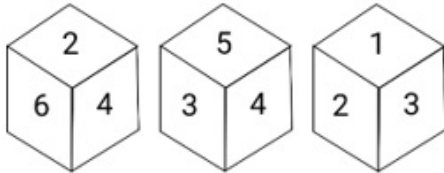
Option 3 ID : 264330300447

Option 4 ID : 264330300444

Status : Answered

Chosen Option : 2

Q.2 Three different positions of the same dice are shown. Find the number on the face opposite to the face showing '3'.



- Ans
- 1. 2
 - 2. 5
 - 3. 1
 - 4. 6

Question ID : 264330112035

Option 1 ID : 264330440225

Option 2 ID : 264330440228

Option 3 ID : 264330440226

Option 4 ID : 264330440227

Status : Answered

Chosen Option : 4

Q.3 Which of the following letter clusters will replace the question mark (?) in the given series to make it logically complete?
JGI, HJG, FME, DPC, ?

- Ans
- 1. BSA
 - 2. BSB
 - 3. BRB
 - 4. ASA

Question ID : 264330102226

Option 1 ID : 264330401371

Option 2 ID : 264330401370

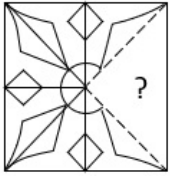
Option 3 ID : 264330401369

Option 4 ID : 264330401372

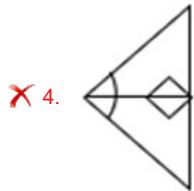
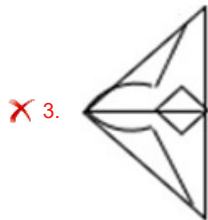
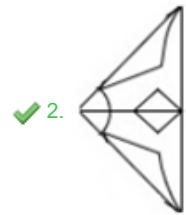
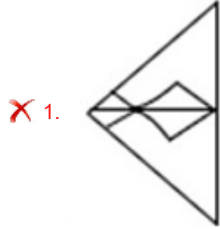
Status : Answered

Chosen Option : 1

Q.4 Select the option figure that will replace the question mark (?) in the figure given below to complete the pattern.



Ans



Question ID : 26433080836
 Option 1 ID : 264330317280
 Option 2 ID : 264330317279
 Option 3 ID : 264330317277
 Option 4 ID : 264330317278
 Status : Answered
 Chosen Option : 2

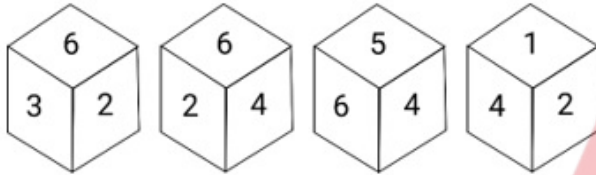
Q.5 Select the number from among the given options that can replace the question mark (?) in the following series.

1, 2, 5, 26, 677, ?

- Ans
- 1. 3255
 - 2. 45245
 - 3. 24563
 - 4. 458330

Question ID : 264330109759
 Option 1 ID : 264330431316
 Option 2 ID : 264330431313
 Option 3 ID : 264330431315
 Option 4 ID : 264330431314
 Status : Answered
 Chosen Option : 4

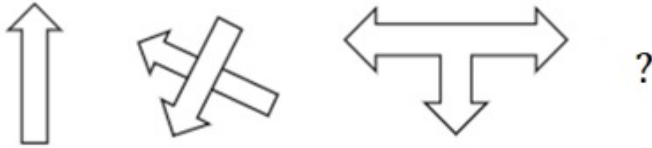
Q.6 Four different positions of the same dice are shown below. Which number is on the face opposite to the face showing '6'?



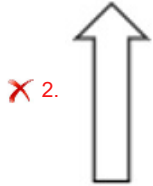
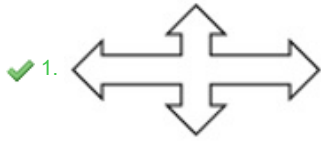
- Ans
- 1. 1
 - 2. 3
 - 3. 2
 - 4. 4

Question ID : 264330112039
 Option 1 ID : 264330440241
 Option 2 ID : 264330440243
 Option 3 ID : 264330440242
 Option 4 ID : 264330440244
 Status : Answered
 Chosen Option : 1

Q.7 Select the figure that will replace the question mark (?) in the following figure series.



Ans

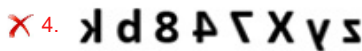
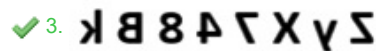

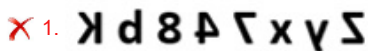


Question ID : 264330112033
 Option 1 ID : 264330440218
 Option 2 ID : 264330440217
 Option 3 ID : 264330440220
 Option 4 ID : 264330440219
 Status : Answered
 Chosen Option : 1

Q.8 Select the correct mirror image of the given figure when the mirror is placed at MN as shown below.

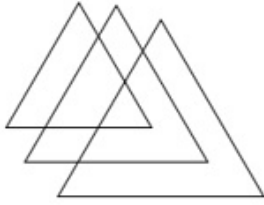


Ans



Question ID : 264330117300
 Option 1 ID : 264330461257
 Option 2 ID : 264330461260
 Option 3 ID : 264330461259
 Option 4 ID : 264330461258
 Status : Answered
 Chosen Option : 3

Q.9 How many triangles are there in the given figure?



Ans ✓ 1.6

✗ 2.5

✗ 3.7

✗ 4.8

Question ID : 26433094985

Option 1 ID : 264330372762

Option 2 ID : 264330372761

Option 3 ID : 264330372763

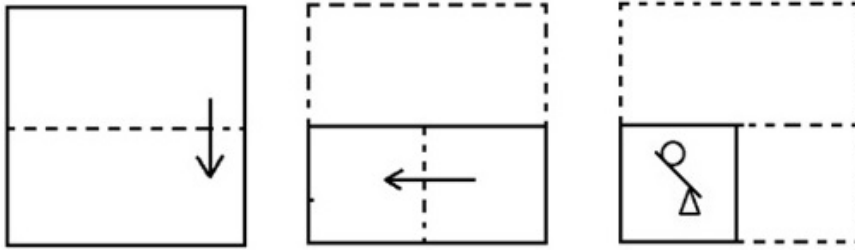
Option 4 ID : 264330372764

Status : Answered


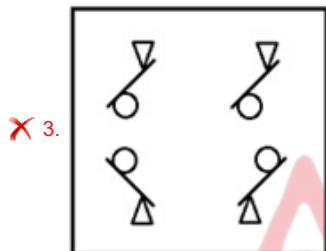

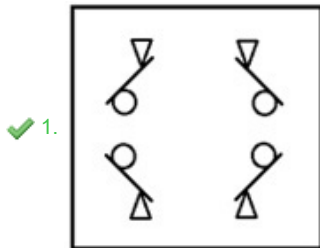
Chosen Option : 1



Q.10 The sequence of folding a piece of paper and the manner in which the folded paper has been cut is shown below. Choose a figure which would most closely resemble the unfolded form of the paper.



Ans



Question ID : 264330112315

Option 1 ID : 264330441348

Option 2 ID : 264330441345

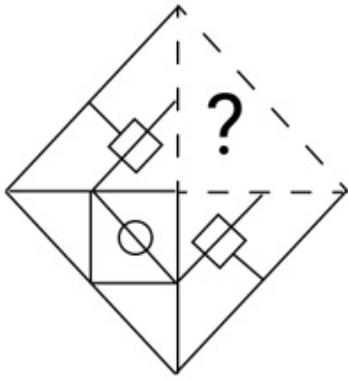
Option 3 ID : 264330441347

Option 4 ID : 264330441346

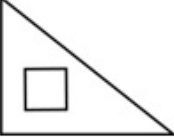
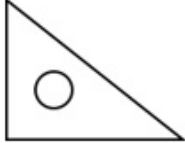
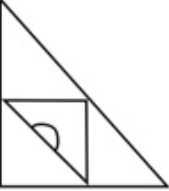
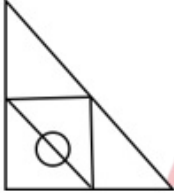
Status : Answered

Chosen Option : 1

Q.11 Select the figure from the options that can replace the question mark (?) and complete the given pattern.



Ans

- ✗ 1. 
- ✗ 2. 
- ✗ 3. 
- ✓ 4. 



Question ID : 264330106463
 Option 1 ID : 264330418154
 Option 2 ID : 264330418153
 Option 3 ID : 264330418156
 Option 4 ID : 264330418155
 Status : Answered
 Chosen Option : 4

Q.12 Six students are sitting around a circular table facing the centre. Red is sitting fourth to the right of White. Blue is sitting second to the right of Gray. Black is sitting third to the right of Pink. White is the immediate neighbour of Gray and Black.. Who is the immediate neighbour of Red and Pink?

- ✓ 1. Blue
- ✗ 2. Black
- ✗ 3. Gray
- ✗ 4. White

Question ID : 26433081654
 Option 1 ID : 264330320449
 Option 2 ID : 264330320452
 Option 3 ID : 264330320450
 Option 4 ID : 264330320451
 Status : Answered
 Chosen Option : 1

Q.13 Which figure from the given options would replace the question mark (?) if the following figure series were to be continued?

B	♡	∩	○	B	♡	○	♡	B	∩	○	♡	?
○	V	8	V	8	∩	∩	V	8	V	8	B	
∩	=	X	∩	X	=	X	=	∩	X	∩	=	

Ans

✗ 1.

○	∩	♡
X	V	8
∩	=	B

✗ 2.

V	∩	○
8	B	♡
X	=	∩

✗ 3.

∩	♡	○
8	B	=
V	X	∩

✓ 4.

∩	♡	○
X	V	8
∩	=	B

Question ID : 26433044934

Option 1 ID : 264330176171

Option 2 ID : 264330176173

Option 3 ID : 264330176174

Option 4 ID : 264330176172

Status : Answered

Chosen Option : 4

Q.14 Which figure should replace the question mark (?) if the series were to be continued?

A	U	9	9	A	U	S	9	A	A	S	9	
	S		=			□		U				?
	=		S			U		□				

Ans

✗ 1.

9	□	A
	S	
	U	

✓ 2.

□	A	S
	4	
	9	

✗ 3.

S	9	□
	4	
	A	

✗ 4.

□	A	S
	U	
	9	

Question ID : 264330130796

Option 1 ID : 264330512298

Option 2 ID : 264330512296

Option 3 ID : 264330512297

Option 4 ID : 264330512295

Status : Answered

Chosen Option : 4

Q.15 Select the word-pair that best represents a similar relationship to the one expressed in the pair of words given below.

(The words must be considered as meaningful English words and must not be related to each other based on the number of letters/number of consonants/vowels in the word.)

Exit : Leave

Ans ✗ 1. Fate : Fete

✓ 2. Select : Choose

✗ 3. Start : End

✗ 4. Moat : Mote

Question ID : 26433053231

Option 1 ID : 264330208229

Option 2 ID : 264330208228

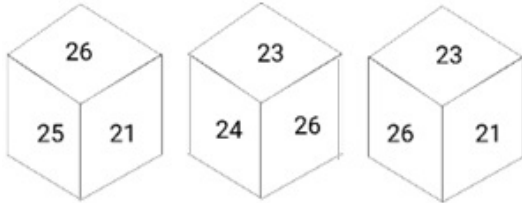
Option 3 ID : 264330208226

Option 4 ID : 264330208227

Status : Answered

Chosen Option : 2

Q.16 Six numbers, 21, 22, 23, 24, 25 and 26 are written on different faces of a dice. Three positions of this dice are shown here. Find the number on the face opposite 21.



Ans 1. 24

2. 22

3. 23

4. 25

Question ID : 264330106413

Option 1 ID : 264330417955

Option 2 ID : 264330417953

Option 3 ID : 264330417954

Option 4 ID : 264330417956

Status : Answered

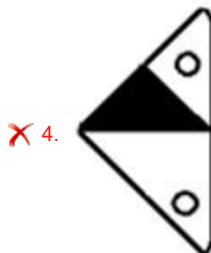
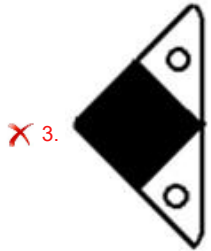
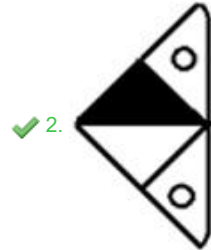
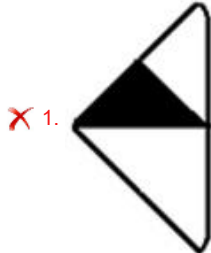
Chosen Option : 1



Q.17 Select the option figure that will replace the question mark (?) in the figure given below to complete the pattern.



Ans



Question ID : 26433089462
 Option 1 ID : 264330351351
 Option 2 ID : 264330351350
 Option 3 ID : 264330351352
 Option 4 ID : 264330351349
 Status : Answered
 Chosen Option : 2

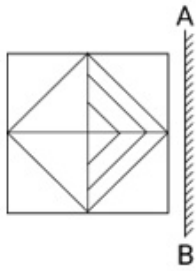
Q.18 Select the set in which the numbers are related in the same way as are the numbers of the following sets.

(NOTE: Operations should be performed on the whole numbers, without breaking down the numbers into its constituent digits. E.g. 13 – Operations on 13 such as adding/deleting/multiplying etc. to 13 can be performed. Breaking down 13 into 1 and 3 and then performing mathematical operations on 1 and 3 is not allowed)
(4, 42, 5), (3, 45, 7)

- Ans 1. (6, 49, 3)
 2. (6, 32, 2)
 3. (7, 43, 4)
 4. (7, 42, 5)

Question ID : 26433097192
 Option 1 ID : 264330381467
 Option 2 ID : 264330381465
 Option 3 ID : 264330381466
 Option 4 ID : 264330381468
 Status : Answered
 Chosen Option : 4

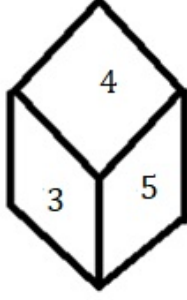
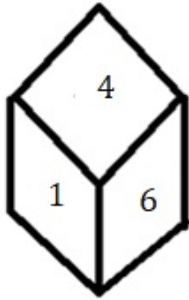
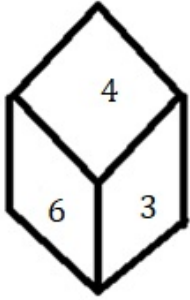
Q.19 Select the correct mirror image of the given figure when the mirror is placed at 'AB' as shown.



- Ans 1.
- 2.
- 3.
- 4.

Question ID : 264330114260
 Option 1 ID : 264330449126
 Option 2 ID : 264330449125
 Option 3 ID : 264330449128
 Option 4 ID : 264330449127
 Status : Answered
 Chosen Option : 2

Q.20 Three different positions of the same dice are shown. Find the number on the face opposite the face having '2'.

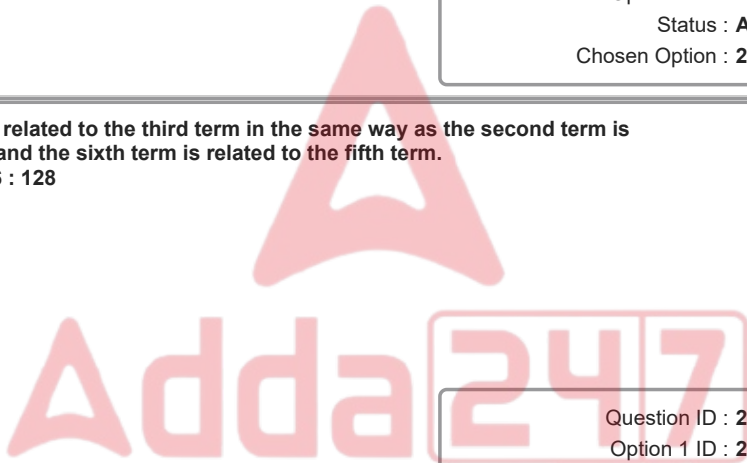


- Ans
- 1. 1
 - 2. 4
 - 3. 3
 - 4. 6

Question ID : 264330113651
 Option 1 ID : 264330446689
 Option 2 ID : 264330446692
 Option 3 ID : 264330446691
 Option 4 ID : 264330446690
 Status : Answered
 Chosen Option : 2

Q.21 Select the option that is related to the third term in the same way as the second term is related to the first term and the sixth term is related to the fifth term.
 400 : 200 :: 248 : ? :: 256 : 128

- Ans
- 1. 200
 - 2. 124
 - 3. 148
 - 4. 114



Question ID : 264330101043
 Option 1 ID : 264330396720
 Option 2 ID : 264330396717
 Option 3 ID : 264330396719
 Option 4 ID : 264330396718
 Status : Answered
 Chosen Option : 2

Q.22 Which two signs should be interchanged to make the following equation correct?
 $29 - 23 + 42 \times 21 \div 2 = 10$

- Ans
- 1. - and +
 - 2. + and +
 - 3. - and ×
 - 4. ÷ and ×

Question ID : 264330101076
 Option 1 ID : 264330396849
 Option 2 ID : 264330396852
 Option 3 ID : 264330396851
 Option 4 ID : 264330396850
 Status : Answered
 Chosen Option : 4

Q.23 In a certain code language, 'BAE' is written as '512' and 'WIN' is written as '14923'.
How will 'HER' be written in that language?

- Ans
- 1. 1826
 - 2. 1844
 - 3. 1838
 - 4. 1858

Question ID : 26433089414

Option 1 ID : 264330351157

Option 2 ID : 264330351159

Option 3 ID : 264330351158

Option 4 ID : 264330351160

Status : Answered

Chosen Option : 4

Q.24 Select the correct combination of mathematical signs that can sequentially replace the
* signs and balance the given equation.
 $54*16*3*6*2*9$

- Ans
- 1. +, x, -, +, =
 - 2. +, -, x, +, =
 - 3. -, x, +, +, =
 - 4. +, -, x, +, =

Question ID : 26433079086

Option 1 ID : 264330310348

Option 2 ID : 264330310349

Option 3 ID : 264330310350

Option 4 ID : 264330310351

Status : Answered

Chosen Option : 3

Q.25 Which of the following option figures will complete the pattern in the figure given below?

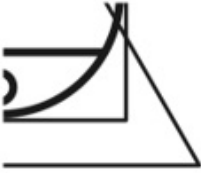


Ans

X 1.



X 2.



X 3.



✓ 4.



Question ID : 26433089629
 Option 1 ID : 264330352020
 Option 2 ID : 264330352018
 Option 3 ID : 264330352019
 Option 4 ID : 264330352017
 Status : Answered
 Chosen Option : 4

Section : Numerical Ability

Q.1 If 4 men or 8 women can do a work in 12 days, then in how many days can 9 men and 6 women do the same work?

Ans X 1. 5

✓ 2. 4

X 3. 3

X 4. 6

Question ID : 264330104328
 Option 1 ID : 264330409615
 Option 2 ID : 264330409614
 Option 3 ID : 264330409613
 Option 4 ID : 264330409616
 Status : Answered
 Chosen Option : 2

Q.2 The selling price of 32 items is equal to the cost price of 45 items. What is the percentage of profit made on the sale of each item?

- Ans
- 1. 40.75%
 - 2. 40.5%
 - 3. 40.725%
 - 4. 40.625%

Question ID : 264330183824

Option 1 ID : 264330720972

Option 2 ID : 264330720973

Option 3 ID : 264330720974

Option 4 ID : 264330720975

Status : Answered

Chosen Option : 4

Q.3 A person divides his property so that his wife's share to his daughter's and the daughter's share to his son's, are both in the ratio 1 : 4. If the wife gets ₹5,000 less than the son, the value (in ₹) of the whole property is:

- Ans
- 1. 7,000
 - 2. 5,000
 - 3. 6,000
 - 4. 8,000

Question ID : 264330129427

Option 1 ID : 264330507076

Option 2 ID : 264330507074

Option 3 ID : 264330507075

Option 4 ID : 264330507077

Status : Answered

Chosen Option : 1

Q.4 The LCM of two numbers is 12 times their HCF. One of the numbers is 8 and the sum of the HCF and LCM is 52. What is the other number?

- Ans
- 1. 22
 - 2. 24
 - 3. 26
 - 4. 28

Question ID : 264330104149

Option 1 ID : 264330408897

Option 2 ID : 264330408898

Option 3 ID : 264330408899

Option 4 ID : 264330408900

Status : Answered

Chosen Option : 2

Q.5 In an equilateral triangle, each side is 'a' units. The altitude of this triangle is:

Ans

✓ 1. $\frac{a\sqrt{3}}{2}$

✗ 2. $\frac{4a}{3}$

✗ 3. $\frac{\sqrt{3} a}{\sqrt{2}}$

✗ 4. $\frac{3a^2}{4}$

Question ID : 264330104367

Option 1 ID : 264330409769

Option 2 ID : 264330409770

Option 3 ID : 264330409771

Option 4 ID : 264330409772

Status : Answered

Chosen Option : 1

Q.6 The inradius of a triangle is 7 cm and its area is 343 cm². The perimeter of the triangle is

Ans ✓ 1. 98 cm

✗ 2. 68 cm

✗ 3. 88 cm

✗ 4. 49 cm

Question ID : 264330119359

Option 1 ID : 264330467723

Option 2 ID : 264330467725

Option 3 ID : 264330467724

Option 4 ID : 264330467726

Status : Not Answered

Chosen Option : --

Q.7 A sum of ₹2,52,500 at the rate of 4.5% per annum for a period of 2.5 years will amount to how much (in ₹) if the money is invested at simple interest?

Ans ✗ 1. 2,75,906.50

✗ 2. 2,78,906.25

✗ 3. 2,82,906.25

✓ 4. 2,80,906.25

Question ID : 264330119932

Option 1 ID : 264330470005

Option 2 ID : 264330470004

Option 3 ID : 264330470003

Option 4 ID : 264330470006

Status : Answered

Chosen Option : 4

Q.8 In how many seconds will a 210 m long train, travelling at a speed of 97 km/h, come from behind and completely cross a 240 m long train travelling at 79 km/h in the same direction as that of the first train?

- Ans
- 1. 96
 - 2. 100
 - 3. 90
 - 4. 84

Question ID : 264330122848
Option 1 ID : 264330481461
Option 2 ID : 264330481462
Option 3 ID : 264330481460
Option 4 ID : 264330481459
Status : Answered
Chosen Option : 3

Q.9 The marked price of a book is ₹700 but the retailer gets a discount of 20%. If the retailer sells the book at marked price, then the profit percentage is:

- Ans
- 1. 20%
 - 2. 30%
 - 3. 25%
 - 4. 22%

Question ID : 264330130931
Option 1 ID : 264330512835
Option 2 ID : 264330512837
Option 3 ID : 264330512836
Option 4 ID : 264330512838
Status : Answered
Chosen Option : 3

Q.10 A person loses 18% of his money and after spending 87% of the remainder, he is left with ₹122. How much did he originally have? (Approximate value)

- Ans
- 1. ₹1,200
 - 2. ₹1,143.8
 - 3. ₹1,300
 - 4. ₹1,144.5

Question ID : 264330131828
Option 1 ID : 264330516411
Option 2 ID : 264330516414
Option 3 ID : 264330516413
Option 4 ID : 264330516412
Status : Answered
Chosen Option : 4

Q.11 The compound interest on a sum of ₹8,000 becomes ₹1,261 in 18 months. Find the rate of interest if interest is compounded half-yearly.

- Ans
- 1. 12%
 - 2. 20%
 - 3. 10%
 - 4. 8%

Question ID : 264330109256
Option 1 ID : 264330429302
Option 2 ID : 264330429304
Option 3 ID : 264330429301
Option 4 ID : 264330429303
Status : Answered
Chosen Option : 3

Q.12 Two wires, 18 m and 24 m long, are to be cut into pieces of equal length. Find the maximum length of each piece (in m).

- Ans
- 1. 12
 - 2. 18
 - 3. 8
 - 4. 6

Question ID : 264330118033
Option 1 ID : 264330463947
Option 2 ID : 264330463950
Option 3 ID : 264330463948
Option 4 ID : 264330463949
Status : Answered
Chosen Option : 4

Q.13 The average of 5 consecutive odd numbers is 63. Which of the following is the largest number among them?

- Ans
- 1. 65
 - 2. 69
 - 3. 67
 - 4. 71

Question ID : 264330129988
Option 1 ID : 264330509183
Option 2 ID : 264330509185
Option 3 ID : 264330509184
Option 4 ID : 264330509186
Status : Answered
Chosen Option : 3

Q.14 Find the greatest number that divides 90, 180 and 240 exactly.

- Ans
- 1. 20
 - 2. 60
 - 3. 15
 - 4. 30

Question ID : 264330109227
Option 1 ID : 264330429186
Option 2 ID : 264330429188
Option 3 ID : 264330429187
Option 4 ID : 264330429185
Status : Answered
Chosen Option : 4

Q.15 The base of a right-angle triangle is increased by 60%. How much its height should be decreased to retain the same area?

- Ans
- 1. 30%
 - 2. 45.2%
 - 3. 60%
 - 4. 37.5%

Question ID : 264330142526
Option 1 ID : 264330558383
Option 2 ID : 264330558385
Option 3 ID : 264330558386
Option 4 ID : 264330558384
Status : Answered
Chosen Option : 4

Section : Computer Proficiency

Q.1 In MS Excel 365, Which of the following is NOT a type of chart in MS Excel?

- Ans
- 1. Line chart
 - 2. Bar chart
 - 3. Pie chart
 - 4. Space chart

Question ID : 264330178560
Option 1 ID : 264330700267
Option 2 ID : 264330700268
Option 3 ID : 264330700269
Option 4 ID : 264330700270
Status : Answered
Chosen Option : 4

Q.2 Which of the following is used in MS Word 365 to change the case in a reverse way?

- Ans
- 1. Reverse case
 - 2. Change case
 - 3. Toggle case
 - 4. Alter case

Question ID : 264330176709
Option 1 ID : 264330693051
Option 2 ID : 264330693052
Option 3 ID : 264330693054
Option 4 ID : 264330693053
Status : Answered
Chosen Option : 1

Q.3 In Microsoft Excel 365, which option should be selected if you want to save a workbook as a macro-enabled workbook with a different file name and location?

- Ans**
- 1. Save As
 - 2. Save a Copy
 - 3. Save Excel
 - 4. Save Workspace

Question ID : 264330178084
 Option 1 ID : 264330698399
 Option 2 ID : 264330698400
 Option 3 ID : 264330698401
 Option 4 ID : 264330698402
 Status : Answered
 Chosen Option : 1

Q.4 What icon is used for attaching a file or document to an email message?

- Ans**
- 1. Pen icon
 - 2. Smiley icon
 - 3. Paper clip icon
 - 4. Trash can icon

Question ID : 264330182093
 Option 1 ID : 264330714214
 Option 2 ID : 264330714211
 Option 3 ID : 264330714213
 Option 4 ID : 264330714212
 Status : Answered
 Chosen Option : 3

Q.5 What is the main purpose of a search engine?

- Ans**
- 1. Editing news articles
 - 2. Playing online games
 - 3. Sending emails
 - 4. Finding information on the internet

Question ID : 264330180666
 Option 1 ID : 264330708633
 Option 2 ID : 264330708631
 Option 3 ID : 264330708632
 Option 4 ID : 264330708634
 Status : Answered
 Chosen Option : 4

Q.6 Which icon is commonly used to undo the last action performed in MS Word 365?

- Ans**
- 1. A pair of scissors
 - 2. A curved arrow pointing to the left
 - 3. A trash can
 - 4. A pencil

Question ID : 264330180862
 Option 1 ID : 264330709411
 Option 2 ID : 264330709412
 Option 3 ID : 264330709414
 Option 4 ID : 264330709413
 Status : Answered
 Chosen Option : 2

Q.7 In MS Excel 365, which of the following keyboard shortcut keys is used to insert a new row in MS-Excel 365?

- Ans
- 1. Ctrl + Alt + n
 - 2. Ctrl + Alt + + (plus key)
 - 3. Ctrl + shift + n
 - 4. Ctrl + shift + + (plus key)

Question ID : 264330179439
 Option 1 ID : 264330703762
 Option 2 ID : 264330703761
 Option 3 ID : 264330703759
 Option 4 ID : 264330703760
 Status : Answered
 Chosen Option : 3

Q.8 How do we move the cursor to the beginning of a Microsoft Word 365 document?

- Ans
- 1. By pressing 'Ctrl + End'
 - 2. By pressing 'Ctrl + Home'
 - 3. By pressing 'Ctrl + PgUp'
 - 4. By pressing 'Ctrl + PgDn'

Question ID : 264330182073
 Option 1 ID : 264330714132
 Option 2 ID : 264330714131
 Option 3 ID : 264330714133
 Option 4 ID : 264330714134
 Status : Answered
 Chosen Option : 2

Q.9 Which of the following groups within the Insert tab will help us create a table in Microsoft Word 365?

- Ans
- 1. Tables
 - 2. Illustrations
 - 3. Pages
 - 4. Links

Question ID : 264330182066
 Option 1 ID : 264330714104
 Option 2 ID : 264330714105
 Option 3 ID : 264330714103
 Option 4 ID : 264330714106
 Status : Answered
 Chosen Option : 1

Q.10 What are the icons below the menu bar in a word processing application called?

- Ans
- 1. Toolbar icons
 - 2. Shortcut icons
 - 3. Format icons
 - 4. Tool icons

Question ID : 264330173599
 Option 1 ID : 264330680878
 Option 2 ID : 264330680877
 Option 3 ID : 264330680876
 Option 4 ID : 264330680875
 Status : Answered
 Chosen Option : 3