

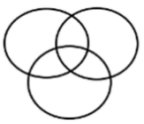
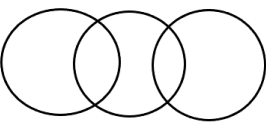

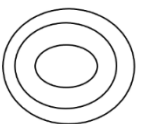
## All India Live Test SSC GD Most Expected Mock for Upcoming Shifts

**Q1. Muskan, Amrita, Pranjali, Deepti, Riya, and Sonali are six friends sitting around a circle facing the center. Muskan is between Amrita and Pranjali. Amrita is opposite to Deepti. Riya is not an immediate neighbor of Amrita. Who is opposite to Sonali?**

- (a) Deepti
- (b) Riya
- (c) Muskan
- (d) Pranjali

**Ans.(d)**

**Q2. In the given Venn-diagrams, which Venn diagram shows the relationship between Engineer, Women, Cardiologist ?**

- (a) 
- (b) 
- (c) 
- (d) 

**Ans.(a)**

**Q3. What will come in place of the question mark (?) in the following equation, if '+' and '-' are interchanged and '×' and '÷' are interchanged?**

$$321 - 371 \div 22 + 216 \times 6 = ?$$

- (a) 7848
- (b) 7884
- (c) 8747
- (d) 8447

**Ans.(d)**

**Q4. Select the number from among the given options that can replace the question mark(?) in the following series.**

$$3, 21, 57, 129, 273, ?$$

- (a) 234
- (b) 561
- (c) 456
- (d) 345

**Ans.(b)**

**Q5. In the following question, select the missing number from the given series.**

**211, 179, 146, 112, 77, ?**

- (a) 40
- (b) 43
- (c) 44
- (d) 41

**Ans.(d)**

**Q6. Which of the following numbers will replace the question mark (?) in the given series?**

**30 , 54, 86 , 126 , 174 , ?**

- (a) 230
- (b) 210
- (c) 208
- (d) 220

**Ans.(a)**

**Q7. Six people, S, T, U, V, W, and X, are sitting in a straight row facing north. Only two people sit to the left of U. Only two people sit between U and X. T sits to the immediate right of S. W sits to the immediate left of V. V is not a neighbor of X. Who sits at the extreme left end of the row?**

- (a) W
- (b) X
- (c) V
- (d) S

**Ans.(a)**

**Q8. In a code language, if KARAN is written as 45, then how will ARUN be written as in that language?**

- (a) 54
- (b) 41
- (c) 42
- (d) 56

**Ans.(a)**

**Q9. How many such pairs of letters are there in the word ABSENT (in both forward and backward directions) which have as many letters between them as there are in the English alphabetical order?**

- (a) None
- (b) Three
- (c) Two
- (d) One

**Ans.(d)**

**Q10. In a certain code of language**

**A # B means 'A is the father of B'**

**A @ B means 'A is the brother of B'**

**A & B means 'A is the son of B'**

**If H & I @ J # K @ L, then how is J related to L?**

- (a) Brother
- (b) Father
- (c) Son's son
- (d) Father's father

**Ans.(b)**

**Q11. If 'A' denotes '+', 'B' denotes '×', 'C' denotes '-' and 'D' denotes '÷', then what will come in place of '?' in the following equation?**

**80 C 4 B 5 A 20 = ?**

- (a) 20
- (b) 80
- (c) 40
- (d) 120

**Ans.(b)**


**Q12. Select the correct mirror image of the given figure when the mirror is placed at AB as shown below.**



(a)



(b)



(c)



(d)

**Ans.(d)**

**Q13. Find the missing term in the given letter sequence:**

**EHK, JMP, \_\_\_\_\_, TWZ**

- (a) RSV
- (b) ORU
- (c) STU
- (d) OSV

**Ans.(b)**

**Q14. R is the father of P and brother of K, whereas K is the daughter of D and sister-in-law of S. If S is the mother of P, then what is the relationship between S and R?**

- (a) Grand-Father and Grand-Daughter
- (b) Wife and Husband
- (c) Father and Daughter
- (d) Sister and Brother

**Ans.(b)**

**Q15. In a certain code language, 'FOOD' is coded as 'HMQB' and 'EDGE' is coded as 'GBIC'. How will 'MEAT' be coded in the same language?**

- (a) OCDS
- (b) PCCR
- (c) PDCR
- (d) OCCR

**Ans.(d)**

**Q16. Three statements are given followed by three conclusions numbered I, II and III. Assuming the statements to be true, even if they seem to be at variance with commonly known facts, decide which of the conclusions logically follow(s) from the statements.**

**Statements:**

- I. All valleys are mountains.**
- II. Some mountains are hills.**
- III. Some hills are plateaus.**

**Conclusions:**

- I. Some plateaus are mountains.**
- II. Some valleys are plateaus.**
- III. Some mountains are valleys.**

- (a) Only conclusions I and II follows.
- (b) Only conclusions I and III follows.
- (c) Only conclusions II and III follows.
- (d) Only conclusion III follows.

**Ans.(d)**

**Q17. Select the option that represents the letters that, when sequentially placed from left to right in the blanks below, will complete the letter series.**

**C \_ E \_ T \_ W \_ R T C W \_ R \_ C W E \_ \_**

- (a) WRCEETRT
- (b) WRCERTRT
- (c) WRCERERT
- (d) WRCETERT

**Ans.(a)**

**Q18. Three statements are followed by three conclusions numbered I, II and III. Assuming the statements to be true. even if they do not conform to real world knowledge. decide which of the given conclusions/possibilities can be true on the basis of the statements.**

**Statements:**

- 1. All pots are sands,
- 2. Some sands are clays.
- 3. All greys are clays.

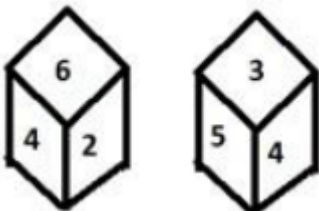
**Conclusions:**

- I. Some greys are pots.
- II. All clays are sands is a possibility.
- III. Some clays are pots.

- (a) Only conclusion I and II are true
- (b) Only conclusion III is true
- (c) Only conclusion II is true
- (d) Only conclusion I is true

**Ans.(c)**

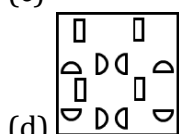
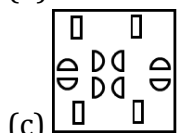
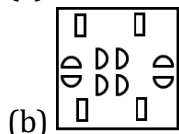
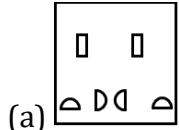
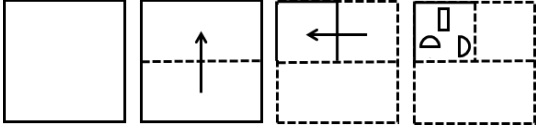
**Q19. Six numbers 1, 2, 3, 4, 5 and 6 are written on different faces of a dice. Two positions of this dice are shown in the figure. Find the number on the face opposite to 5.**



- (a) 2
- (b) 3
- (c) 1
- (d) 6

**Ans.(d)**

**Q20. A square sheet of paper is folded along the dotted line successively along the directions shown and is then punched in the last. How would the paper look when unfolded?**



**Ans.(c)**

**Q21. Which country did India defeat in the finals of the ICC Men's T20 World Cup 2024?**

- (a) Australia
- (b) England
- (c) New Zealand
- (d) South Africa

**Ans.(d)**

**Q22. Where were the two major events, HIM DRONE-A-THON 2024 and HIMTECH 2024, hosted by the Indian Army?**

- (a) Srinagar, Jammu & Kashmir
- (b) Manali, Himachal Pradesh
- (c) Leh, Ladakh
- (d) Gangtok, Sikkim

**Ans.(c)**

**Q23. Which of the following is NOT a provision under the Public Examinations (Prevention of Unfair Means) Act, 2024?**

- (a) Imprisonment of 3 to 10 years for offenders
- (b) Fines of up to Rs. 5 crore for organized crimes
- (c) Barring institutions from conducting public exams for 4 years
- (d) Conducting surprise checks at exam centers

**Ans.(b)**

**Q24. The Green Revolution started in the year 1965 and the \_\_\_\_\_ five year plan was between 1961-1966.**

- (a) 5th
- (b) 2nd
- (c) 1st
- (d) 3rd

**Ans.(d)**

**Q25. Famed Bharatnatyam exponent and founder of Kalakshetra, Rukmini Devi Arundale was the proud recipient of 1956 \_\_\_\_\_.**

- (a) Natraj Academy award
- (b) Bharat Ratna
- (c) Kalidas Samman
- (d) Padma Bhushan

**Ans.(d)**

**Q26. Electromagnetic induction was discovered by:**

- (a) Isaac Newton
- (b) Michael Faraday
- (c) Alessandro Volta
- (d) Albert Einstein

**Ans.(b)**

**Q27. When did M. S. Swaminathan pass away?**

- (a) July 15, 2023
- (b) September 28, 2023
- (c) October 10, 2023
- (d) August 25, 2023

**Ans.(b)**

**Q28. Durand Cup is associated with \_\_\_\_\_.**

- (a) Hockey
- (b) Badminton
- (c) Football
- (d) Golf

**Ans.(c)**

**Q29. Which famous battle did Akbar win against Rana Pratap of Mewar?**

- (a) Battle of Haldighati
- (b) Battle of Plassey
- (c) Battle of Panipat
- (d) Battle of Talikota

**Ans.(a)**

**Q30. Fundamental duties were not placed in Part III of the Indian Constitution because Part III is \_\_\_\_\_.**

- (a) non-justiciable
- (b) justiciable
- (c) not enforceable
- (d) absolute

**Ans.(b)**

**Q31. How many districts were surveyed in the 2011 Census?**

- (a) 640
- (b) 593
- (c) 710
- (d) 732

**Ans.(a)**

**Q32. In the Union Budget 2024, which initiative did the Finance Minister announce to enhance productivity in agriculture?**

- (a) Introduction of genetically modified crops
- (b) Expansion of irrigation facilities nationwide
- (c) A new study program for farmers
- (d) A comprehensive review of the agriculture research setup

**Ans.(d)**

**Q33. Article 323 of the Indian Constitution deals with \_\_\_\_\_.**

- (a) expenses of Public Services Commissions
- (b) reports of Public Services Commissions
- (c) functions of Public Services Commissions
- (d) power to extend functions of Public Services Commissions

**Ans.(b)**

**Q34. When did Dmitri Mendeleev invent the periodic table, ordering the symbols of the chemical elements according to their atomic weights?**

- (a) 1794
- (b) 1869
- (c) 1890
- (d) 1779

**Ans.(b)**

**Q35. ATM booths come under which sector of the economic activity?**

- (a) Primary sector
- (b) Quaternary sector
- (c) Tertiary Sector
- (d) Secondary sector

**Ans.(c)**



**Q36. The first Asian games were held in-**

- (a) Iran
- (b) Pakistan
- (c) China
- (d) India

**Ans.(d)**

**Q37. Which instrument is played by the famous music personality Pt. Shiv Kumar Sharma?**

- (a) Sitar
- (b) Guitar
- (c) Santoor
- (d) Piano

**Ans.(c)**

**Q38. Which organization was awarded the Nobel Peace Prize 2024 by the Norwegian Nobel Committee?**

- (a) Amnesty International
- (b) Nihon Hidankyo
- (c) Greenpeace
- (d) Médecins Sans Frontières

**Ans.(b)**

**Q39. According to the 2011 Census, which state has the highest sex ratio?**

- (a) Kerala
- (b) Uttar Pradesh
- (c) Maharashtra
- (d) West Bengal

**Ans.(a)**

**Q40. Where was the 153rd birth anniversary of Mahatma Gandhi celebrated by the High Commission of India in 2022?**

- (a) India House, London
- (b) Peace Park, Seychelles
- (c) Raj Ghat, New Delhi
- (d) United Nations Headquarters, New York

**Ans.(b)**

**Q41. A man rides his bicycle for 10 km at an average speed of 12 km/h and further travels 12 km at an average speed of 10 km/h. What is his approximate average speed for the entire trip?**

- (a) 10.9 km/h
- (b) 8.10 km/h
- (c) 8.19 km/h
- (d) 8 km/h

**Ans.(a)**

**Q42. A and B can complete a work separately in 10 days and 15 days, respectively. B alone work for 3 days and then he left the work. In how many days will A finish the remaining work?**

- (a) 6
- (b) 9
- (c) 8
- (d) 7

**Ans.(c)**

**Q43. A train of length 256m, running at 50 km/h, crosses another train moving in the opposite direction at 40 km/h in 18 seconds. What is the length of the other train?**

- (a) 300m
- (b) 194m
- (c) 285m
- (d) 289m

**Ans.(b)**

**Q44. A table and a swing were sold for Rs. 9,936 each. The table was sold for a profit of 8% and the swing was sold for a loss of 8%. What is the gain or loss percentage in the whole transaction?**

- (a) 2% profit
- (b) 0.64% loss
- (c) 0.64% profit
- (d) No profit no loss

**Ans.(b)**

**Q45. The successive discount of 25%, 20% and 10% is equivalent to a single discount of**

- (a) 46%
- (b) 48%
- (c) 54%
- (d) 44%

**Ans.(a)**

**Q46. The compound interest on a sum of ₹ 6,000 at a certain rate for  $1\frac{1}{2}$  years is ₹ 1,986, the interest being compounded every 6 months. What will be the simple interest on the same sum for 3 years at half the previous rate?**

- (a) ₹ 1,880
- (b) ₹ 1,840
- (c) ₹ 1,680
- (d) ₹ 1,800

**Ans.(d)**

**Q47. Reshma took a loan of Rs. 12,00,000 with simple interest for as many years as the rate of interest. If she paid Rs. 9,72,000 as interest at the end of the loan period, what was the rate of interest per annum ?**

- (a) 7.5%
- (b) 8%
- (c) 8.7%
- (d) 9%

**Ans.(d)**

**Q48. What is the ratio of the mean proportional of 1.21 and 0.09 with the mean proportional of 0.16 and 0.36?**

- (a) 11 : 8
- (b) 13 : 8
- (c) 13 : 12
- (d) 11 : 13

**Ans.(a)**

**Q49. What is the ratio of mean proportional between 3.6 and 12.1 and third proportional between 2 and 11?**

- (a) 36 : 5
- (b) 6 : 5
- (c) 11 : 36
- (d) 6 : 55

**Ans.(d)**

**Q50. A class of 30 students appeared in a test. The average score of 12 students is 62, and that of the rest is 74. What is the average score of the class?**

- (a) 70.2
- (b) 69.2
- (c) 68.2
- (d) 67.2

**Ans.(b)**

**Q51. The average weight of 35 students in a class is 40 kgs. Five of the students of this class whose average weight is 42 kgs left the class. Find the average weight of the remaining 30 students.**

- (a)  $39\frac{2}{3}$  kgs
- (b)  $19\frac{2}{3}$  kgs
- (c)  $49\frac{2}{3}$  kgs
- (d)  $29\frac{2}{3}$  kgs

**Ans.(a)**

**Q52. If 6428A83 is divisible by 9, then the value of A is equal to :**

- (a) 6
- (b) 7
- (c) 5
- (d) 3

**Ans.(c)**

**Q53. Simplify**

$$4\frac{4}{5} \times \frac{3}{8} + \left(3\frac{1}{2} + \frac{2}{3}\right) \times \frac{4}{5}$$
$$454 \times 83 + (321 + 32) \times 54$$

(a)  $\frac{15}{77}$

(b)  $\frac{77}{15}$

(c)  $\frac{3}{10}$

(d)  $\frac{10}{3}$

**Ans.(b)**

**Q54. Simplify:**

$$(36 \div 6) \div 3 + (18 \div 9) \times 4 - (12 \div 6) \times (5 \div 2)$$

(a) 10

(b) 5

(c) 21

(d) 15

**Ans.(b)**

**Q55. The selling price of a sewing machine is ₹ 19,440 . If it was sold at 8% profit, find its cost price.**

(a) ₹20,559.20

(b) ₹16,000.00

(c) ₹18,000.00

(d) ₹17,595.20

**Ans.(c)**

**Q56. Two numbers are in the ratio 1:4 and their LCM and HCF are 84 and 21. Find the smaller number.**

(a) 18

(b) 84

(c) 108

(d) 21

**Ans.(d)**

**Q57. Find the largest three-digit number that is exactly divisible by 6, 9, 12 and 15.**

(a) 900

(b) 895

(c) 999

(d) 925

**Ans.(a)**

**Q58. The volumes of two cones are in the ratio of 3 : 2 and their radii are in the ratio 3 : 4. The ratio of their heights is:**

- (a) 8:3
- (b) 9:4
- (c) 4:9
- (d) 2:1

**Ans.(a)**

**Q59. Find the circumference of a circle whose area is  $154\text{m}^2$ .**

- (a) 44 m
- (b) 29.5 m
- (c) 39 m
- (d) 52 m

**Ans.(a)**

**Q60. A shopkeeper sells 30 items at Rs.60 per item, after giving a discount of 20%. He earns 25% profit. If the discount is not given, the profit gained is:**

- (a)  $65\frac{1}{2}\%$
- (b) 66%
- (c)  $56\frac{1}{4}\%$
- (d) 60%

**Ans.(c)**

**Q61. Select the most appropriate meaning of the highlighted idiom in the given sentence. She had to break the bank to buy that purse.**

- (a) To be very expensive
- (b) To rob a bank
- (c) To buy something exclusive
- (d) To go beyond one's means

**Ans.(a)**

**Q62. Select the most appropriate option to fill in the blank.**

**She liked \_\_\_\_\_ flat.**

- (a) they are
- (b) their
- (c) there
- (d) they're

**Ans.(b)**

**Q63. Select the correct option to substitute the highlighted segment in the given sentence. If no substitution is required, select 'No substitution'.**

**It is more hot now.**

- (a) more hot then earlier
- (b) No substitution
- (c) hotter now
- (d) hotness now

**Ans.(c)**

**Q64. Select the most appropriate option to substitute the highlighted segment in the given sentence.**

**Your work diary will of benefit if you use it and keep all the information updated.**

- (a) diary will benefit of
- (b) diary will benefitted
- (c) diary will be of benefit
- (d) diary of benefit

**Ans.(c)**

**Q65. Select the most appropriate synonym of the given word.**

**Forbore**

- (a) Refrain
- (b) Submit
- (c) Yield
- (d) Surrender

**Ans.(a)**

**Q66. Select the option that can be used as a one-word substitute for the given group of words. The situation in which a disease is spread by touching someone or something**

- (a) Fatal
- (b) Infected
- (c) Contagion
- (d) Malleable

**Ans.(c)**

**Q67. Select the most appropriate meaning of the given idiom.**

**On the ball**

- (a) Sceptic of changes or developments and thoughtful to react to them
- (b) Aware of any changes or developments and quick to react to them
- (c) Aware of any changes or developments but avoid to react to them
- (d) Unaware of any changes or developments and lazy to react to them

**Ans.(b)**

**Q68. Select the most appropriate option to fill in the blank.**

**We saw a \_\_\_\_ in the city last year.**

- (a) knew
- (b) no
- (c) gnu
- (d) new

**Ans.(c)**

**Q69. Select the most appropriate ANTONYM of the given word.**

**Drenched**

- (a) Airy
- (b) Fresh
- (c) Damp
- (d) Lively

**Ans.(b)**

**Q70. Select the most appropriate ANTONYM of the given word.**

**Bleak**

- (a) Fatigued
- (b) Cordial
- (c) Clustered
- (d) Desolate

**Ans.(b)**

**Q71. Select the most appropriate synonym of the capitalised word in the given sentence.**

**They tried to get official SANCTIONS for the scheme.**

- (a) Committees
- (b) Unholiness
- (c) Permissions
- (d) Substances

**Ans.(c)**

**Q72. Identify the correctly spelt sentence.**

- (a) There were two separte sections of students in my school.
- (b) There were two separate sections of students in my school.
- (c) There were two sepearte sections of students in my school.
- (d) There were two seperate sections of students in my school.

**Ans.(b)**

**Q73. Select the INCORRECTLY spelt word.**

- (a) Irresponsible
- (b) Capacious
- (c) Ravishing
- (d) Inadvertent

**Ans.(d)**

**Q74. The following sentence has been split into four segments. Identify the segment that contains a grammatical error.**

**Smith will / be learning / French when / they are arriving.**

- (a) be learning
- (b) French when
- (c) Smith will
- (d) they are arriving

**Ans.(d)**

**Q75. In the given sentence, a word is given in brackets. Select the most appropriate synonym of the word to fill in the blank.**

**The teacher has \_\_\_\_\_ (admitted) the student's sincere apologies.**

- (a) acknowledged
- (b) executed
- (c) neglected
- (d) denied

**Ans.(a)**

**Q76. Select the most appropriate option to fill in blank number 1.**

**In the following passage, some words have been deleted. Read the passage carefully and select the most appropriate option to fill in each blank.**

**The set of relationships between people, (1) \_\_\_\_\_ their social position and roles, is referred to as society or human society. The people of a region, country, or even the (2) \_\_\_\_\_ world is referred to as a society. A society, as used in the sense of an organisation, is a group of people bound together by functional (3) \_\_\_\_\_, and may include qualities such as national or cultural identity, social solidarity, language or hierarchical organisation. Patterns of relationships between individuals who (4) \_\_\_\_\_ a common culture and institutions define human societies. A society, like other organisations or groups, permits its members to fulfil wants or wishes that they could not (5) \_\_\_\_\_ on their own.**

- (a) including
- (b) discounting
- (c) developing
- (d) resisting

**Ans.(a)**

**Q77. Select the most appropriate option to fill in blank number 2.**

**In the following passage, some words have been deleted. Read the passage carefully and select the most appropriate option to fill in each blank.**

**The set of relationships between people, (1) \_\_\_\_\_ their social position and roles, is referred to as society or human society. The people of a region, country, or even the (2) \_\_\_\_\_ world is referred to as a society. A society, as used in the sense of an organisation, is a group of people bound together by functional (3) \_\_\_\_\_, and may include qualities such as national or cultural identity, social solidarity, language or hierarchical organisation. Patterns of relationships between individuals who (4) \_\_\_\_\_ a common culture and institutions define human societies. A society, like other organisations or groups, permits its members to fulfil wants or wishes that they could not (5) \_\_\_\_\_ on their own.**

- (a) illiterate
- (b) primitive
- (c) absolute
- (d) entire

**Ans.(d)**

**Q78. Select the most appropriate option to fill in blank number 3.**

**In the following passage, some words have been deleted. Read the passage carefully and select the most appropriate option to fill in each blank.**

**The set of relationships between people, (1) \_\_\_\_\_ their social position and roles, is referred to as society or human society. The people of a region, country, or even the (2) \_\_\_\_\_ world is referred to as a society. A society, as used in the sense of an organisation, is a group of people bound together by functional (3) \_\_\_\_\_, and may include qualities such as national or cultural identity, social solidarity, language or hierarchical organisation. Patterns of relationships between individuals who (4) \_\_\_\_\_ a common culture and institutions define human societies. A society, like other organisations or groups, permits its members to fulfil wants or wishes that they could not (5) \_\_\_\_\_ on their own.**

- (a) mutualism
- (b) qualities
- (c) interdependence
- (d) exchange

**Ans.(c)**



**Q79. Select the most appropriate option to fill in blank number 4.**

**In the following passage, some words have been deleted. Read the passage carefully and select the most appropriate option to fill in each blank.**

**The set of relationships between people, (1) \_\_\_\_\_ their social position and roles, is referred to as society or human society. The people of a region, country, or even the (2) \_\_\_\_\_ world is referred to as a society. A society, as used in the sense of an organisation, is a group of people bound together by functional (3) \_\_\_\_\_, and may include qualities such as national or cultural identity, social solidarity, language or hierarchical organisation. Patterns of relationships between individuals who (4) \_\_\_\_\_ a common culture and institutions define human societies. A society, like other organisations or groups, permits its members to fulfil wants or wishes that they could not (5) \_\_\_\_\_ on their own.**

- (a) share
- (b) oppose
- (c) protect
- (d) divide

**Ans.(a)**

**Q80. Select the most appropriate option to fill in blank number 5.**

**In the following passage, some words have been deleted. Read the passage carefully and select the most appropriate option to fill in each blank.**

**The set of relationships between people, (1) \_\_\_\_\_ their social position and roles, is referred to as society or human society. The people of a region, country, or even the (2) \_\_\_\_\_ world is referred to as a society. A society, as used in the sense of an organisation, is a group of people bound together by functional (3) \_\_\_\_\_, and may include qualities such as national or cultural identity, social solidarity, language or hierarchical organisation. Patterns of relationships between individuals who (4) \_\_\_\_\_ a common culture and institutions define human societies. A society, like other organisations or groups, permits its members to fulfil wants or wishes that they could not (5) \_\_\_\_\_ on their own.**

- (a) accomplish
- (b) give up
- (c) escalate
- (d) evacuate

**Ans.(a)**