



रेल भर्ती बोर्ड / RAILWAY RECRUITMENT BOARDS  
सी ई एन आर आर सी - ०१/२०१९ - CEN RRC - 01/2019



Roll Number	
Candidate Name	
Test Center Name	TCS Gito Bitan
Test Date	18/09/2022
Test Time	12:45 PM - 2:15 PM
Subject	Level 1

\* Note

Correct Answer will carry 1 mark per Question.  
Incorrect Answer will carry 1/3 Negative mark per Question.

- Options shown in green color with a tick icon are correct.
- Chosen option on the right of the question indicates the option selected by the candidate.

Section : Level 1

Q.1 Which of the following pigments has a high affinity for oxygen?

- Ans
- 1. Haemoglobin
  - 2. Bilirubin
  - 3. Haemocyanin
  - 4. Melanin

Question ID : 7518977825  
Option 1 ID : 75189731297  
Option 2 ID : 75189731300  
Option 3 ID : 75189731298  
Option 4 ID : 75189731299  
Status : Answered  
Chosen Option : 1

Q.2 The value of 60% of 28% of 250 = \_\_\_\_\_.

- Ans
- 1. 42
  - 2. 56
  - 3. 22
  - 4. 68

Question ID : 75189710639  
Option 1 ID : 75189742555  
Option 2 ID : 75189742554  
Option 3 ID : 75189742556  
Option 4 ID : 75189742553  
Status : Answered  
Chosen Option : 1

**Q.3** The cost of 10 chairs is equal to that of 4 tables. The cost of 15 chairs and 2 tables is equal to ₹2,000. The cost of a table is:

- Ans**
- 1. ₹500
  - 2. ₹100
  - 3. ₹200
  - 4. ₹250

Question ID : 75189710697  
Option 1 ID : 75189742785  
Option 2 ID : 75189742788  
Option 3 ID : 75189742787  
Option 4 ID : 75189742786  
Status : Answered  
Chosen Option : 4

**Q.4** Some consequences of creating monocultures are mentioned below. Which of these are the advantages?

- a. Huge areas are cleared of vegetation
- b. They destroy large amount of biodiversity
- c. Industries can access specific products
- d. They generate revenue for the forest department
- e. Varied needs of local people are not met

- Ans**
- 1. a, b and e
  - 2. a and e
  - 3. c and d
  - 4. b and e

Question ID : 7518974688  
Option 1 ID : 75189718751  
Option 2 ID : 75189718749  
Option 3 ID : 75189718750  
Option 4 ID : 75189718752  
Status : Answered  
Chosen Option : 3

**Q.5** The speed of a car is 20 metres/second. The distance (in kilometres) travelled by the car in 2 hours and 20 minutes is:

- Ans**
- 1. 162
  - 2. 168
  - 3. 166
  - 4. 158

Question ID : 7518979957  
Option 1 ID : 75189739826  
Option 2 ID : 75189739828  
Option 3 ID : 75189739827  
Option 4 ID : 75189739825  
Status : Answered  
Chosen Option : 2

Q.6 Which country's constitution was considered by the makers of the Constitution of India for importing the provisions of Liberty, Equality and Fraternity?

- Ans
- 1. Constitution of Canada
  - 2. Constitution of Australia
  - 3. Constitution of Ireland
  - 4. Constitution of France

Question ID : 7518977269  
Option 1 ID : 75189729075  
Option 2 ID : 75189729073  
Option 3 ID : 75189729076  
Option 4 ID : 75189729074  
Status : Answered

Chosen Option : 4

Q.7 Six students are sitting around a circular table facing the centre (but not necessarily in the same order). Ram is an immediate neighbour of both Shyam and Kamal. Kartik is an immediate neighbour of Kamal. Diksha is sitting to the immediate left of Kartik and Aditya is sitting to the immediate right of Shyam. Who are the immediate neighbours of Kamal?

- Ans
- 1. Ram and Kartik
  - 2. Shyam and Diksha
  - 3. Shyam and Ram
  - 4. Kartik and Diksha

Question ID : 75189710973  
Option 1 ID : 75189743889  
Option 2 ID : 75189743890  
Option 3 ID : 75189743891  
Option 4 ID : 75189743892  
Status : Answered

Chosen Option : 1

Q.8 Which of the following reactions would undergo precipitation?

- Ans
- 1.  $\text{Pb}(\text{NO}_3)_2 + \text{KI}$
  - 2.  $\text{HCl} + \text{NaOH}$
  - 3.  $\text{H}_2\text{SO}_4 + 2\text{NaOH}$
  - 4.  $\text{HNO}_3 + \text{NaOH}$

Question ID : 7518979626  
Option 1 ID : 75189738504  
Option 2 ID : 75189738501  
Option 3 ID : 75189738502  
Option 4 ID : 75189738503  
Status : Answered

Chosen Option : 2

Q.9 Find the value of  $4^{-5} \div 4^7 \times 4^{-6}$ .

- Ans
- 1.  $4^{-18}$
  - 2.  $4^{-20}$
  - 3.  $4^{-16}$
  - 4.  $4^{-14}$

Question ID : 7518979901  
Option 1 ID : 75189739603  
Option 2 ID : 75189739604  
Option 3 ID : 75189739602  
Option 4 ID : 75189739601  
Status : Answered  
Chosen Option : 1

Q.10 If 1 is subtracted from each odd digit and 1 is added to each even digit in the number 92379654, what will be the sum of the digits which are second from the left and third from the right?

- Ans
- 1. 10
  - 2. 8
  - 3. 5
  - 4. 6

Question ID : 7518977750  
Option 1 ID : 75189730998  
Option 2 ID : 75189730999  
Option 3 ID : 75189730997  
Option 4 ID : 75189731000  
Status : Answered  
Chosen Option : 1

Q.11 Six friends, Atiq, Bijoy, Kamal, Faya, Esha and Dhruv are sitting in a straight row facing North (but not necessarily in the same order). Faya is third to the left of Bijoy. Atiq is third to the right of Kamal. Esha is second to the right of Bijoy. Faya is on the extreme left end. Who is at the extreme Right?

- Ans
- 1. Kamal
  - 2. Esha
  - 3. Dhruv
  - 4. Atiq

Question ID : 75189710743  
Option 1 ID : 75189742972  
Option 2 ID : 75189742971  
Option 3 ID : 75189742969  
Option 4 ID : 75189742970  
Status : Answered  
Chosen Option : 2

Q.12 In a house, bulbs A, B and C of rating 30 W, 60 W and 75 W, respectively, are connected in parallel with an electric source. Which of the following is true?

- Ans
- 1. Brightness of all the bulbs is the same
  - 2. Brightness of bulb A is the maximum
  - 3. Brightness of bulb B is the minimum
  - 4. Brightness of bulb C is the maximum

Question ID : 75189711341  
Option 1 ID : 75189745363  
Option 2 ID : 75189745361  
Option 3 ID : 75189745364  
Option 4 ID : 75189745362  
Status : Answered  
Chosen Option : 4

Q.13 The HCF of 64, 48 and  $y$  is 8. Which of the options below cannot be a possible value of  $y$ ?

- Ans
- 1. 88
  - 2. 96
  - 3. 104
  - 4. 72

Question ID : 75189710632  
Option 1 ID : 75189742526  
Option 2 ID : 75189742527  
Option 3 ID : 75189742528  
Option 4 ID : 75189742525  
Status : Answered  
Chosen Option : 1

Q.14 The slope of an indifference curve is measured by:

- Ans
- 1. marginal rate of transformation
  - 2. marginal rate of technical substitution
  - 3. marginal rate of effective exchange
  - 4. marginal rate of substitution

Question ID : 7518976803  
Option 1 ID : 75189727209  
Option 2 ID : 75189727211  
Option 3 ID : 75189727212  
Option 4 ID : 75189727210  
Status : Not Answered  
Chosen Option : --

**Q.15** What will come in the place of '?' in the following equation, if '+' and '-' are interchanged and also 'x' and '+' are interchanged?

$$15 \div 27 \times 3 + 36 - 12 = ?$$

- Ans**
- 1. 110
  - 2. 95
  - 3. 111
  - 4. 105

Question ID : 75189710954  
Option 1 ID : 75189743813  
Option 2 ID : 75189743816  
Option 3 ID : 75189743814  
Option 4 ID : 75189743815  
Status : Answered  
Chosen Option : 3

**Q.16** In a code language, 'hay in the sack' is written as 'it fn en ho', 'the sack is full' is written as 'en ho go bu' and 'the hay is full' is written as 'en bu fn go'. What is the code for the word 'sack' in that language?

- Ans**
- 1. it
  - 2. ho
  - 3. en
  - 4. fn

Question ID : 75189710873  
Option 1 ID : 75189743490  
Option 2 ID : 75189743489  
Option 3 ID : 75189743492  
Option 4 ID : 75189743491  
Status : Answered  
Chosen Option : 2

**Q.17** Six persons, Pratik, Ansh, Rajesh, Shivam, Tanu and Ujma, travelled in different months of the same year viz. January, February, March, April, May and June. Pratik travelled in March. Only one person travelled between Pratik and Ujma. No one travelled between Tanu and Ansh. Ansh travelled in one of the months after Tanu. More than two persons travelled between Ansh and Rajesh. Ansh travelled on one of the months before Rajesh. Who among them travelled in June?

- Ans**
- 1. Ujma
  - 2. Shivam
  - 3. Rajesh
  - 4. Ansh

Question ID : 7518979817  
Option 1 ID : 75189739268  
Option 2 ID : 75189739267  
Option 3 ID : 75189739265  
Option 4 ID : 75189739266  
Status : Answered  
Chosen Option : 3

Q.18 Which of the following is a political right?

- Ans  1. Right to vote
2. Freedom to form associations
3. Freedom of thought and expression
4. Right to religious freedom

Question ID : 7518977277  
Option 1 ID : 75189729107  
Option 2 ID : 75189729105  
Option 3 ID : 75189729108  
Option 4 ID : 75189729106  
Status : Answered  
Chosen Option : 1

Q.19 Which of the following numbers will replace the question mark (?) in the given series?

17, 51, 42, 126, 117, ?

- Ans  1. 273
2. 289
3. 327
4. 351

Question ID : 75189711246  
Option 1 ID : 75189744981  
Option 2 ID : 75189744983  
Option 3 ID : 75189744984  
Option 4 ID : 75189744982  
Status : Not Answered  
Chosen Option : --

Q.20 The two successive members in a homologous series differ from each other by which group?

- Ans  1.  $-\text{CH}_2-$
2.  $-\text{CH}_3$
3.  $-\text{CH}-$
4.  $-\text{C}_2\text{H}$

Question ID : 75189710320  
Option 1 ID : 75189741278  
Option 2 ID : 75189741279  
Option 3 ID : 75189741277  
Option 4 ID : 75189741280  
Status : Answered  
Chosen Option : 1

Q.21 Nichrome is used to make an electric heater because it has:

- Ans
- 1. low resistivity and low melting point
  - 2. low resistivity and high melting point
  - 3. high resistivity and low melting point
  - 4. high resistivity and high melting point

Question ID : 75189711326  
Option 1 ID : 75189745302  
Option 2 ID : 75189745301  
Option 3 ID : 75189745304  
Option 4 ID : 75189745303  
Status : Answered  
Chosen Option : 4

Q.22 Select the option that is related to the fifth number in the same way as the second number is related to the first number and the fourth number is related to the third number.

42 : 7 :: 110 : 11 :: 132 : ?

- Ans
- 1. 13
  - 2. 15
  - 3. 17
  - 4. 12

Question ID : 75189711230  
Option 1 ID : 75189744917  
Option 2 ID : 75189744918  
Option 3 ID : 75189744920  
Option 4 ID : 75189744919  
Status : Answered  
Chosen Option : 4

Q.23 Which of the following processes is NOT applicable to photosynthesis?

- Ans
- 1. Oxidation of carbon dioxide forms carbohydrates
  - 2. Chlorophyll absorbs light
  - 3. Water molecule splits into hydrogen and oxygen
  - 4. Light energy is converted to chemical energy

Question ID : 7518977792  
Option 1 ID : 75189731167  
Option 2 ID : 75189731165  
Option 3 ID : 75189731166  
Option 4 ID : 75189731168  
Status : Answered  
Chosen Option : 1



Q.24 Which of the following balanced reactions is correct for the given reaction?

Silver nitrate + Sodium chloride  $\rightarrow$  Silver chloride + Sodium nitrate

- Ans
- 1.  $\text{AgNO}_3 + 2\text{NaCl} \rightarrow \text{AgCl} + 2\text{NaNO}_3$
  - 2.  $3\text{AgNO}_3 + \text{NaCl} \rightarrow 3\text{AgCl} + 2\text{NaNO}_3$
  - 3.  $2\text{AgNO}_3 + \text{NaCl} \rightarrow 2\text{AgCl} + \text{NaNO}_3$
  - 4.  $\text{AgNO}_3 + \text{NaCl} \rightarrow \text{AgCl} + \text{NaNO}_3$

Question ID : 75189710328

Option 1 ID : 75189741312

Option 2 ID : 75189741311

Option 3 ID : 75189741309

Option 4 ID : 75189741310

Status : Answered

Chosen Option : 4

Q.25 The most important Gondwana coal fields that lie in the Jharkhand-Bengal coal belt of India are located in the \_\_\_\_\_.

- Ans
- 1. Manali Valley
  - 2. Dehradun
  - 3. Damodar Valley
  - 4. Kaveri Basin

Question ID : 7518978906

Option 1 ID : 75189735621

Option 2 ID : 75189735622

Option 3 ID : 75189735624

Option 4 ID : 75189735623

Status : Answered

Chosen Option : 3

**Q.26** Read the given statement and the arguments carefully and select the appropriate answer from the given options.

Statement:

Global warming has become an unprecedented issue over the globe.

Argument :

- I. Urban life style produces a vast amount of greenhouse gases.
- II. Change in temperature in many countries, is an indicator of global warming.

- Ans**
- 1. II weakens while I strengthens the statement.
  - 2. I weakens while II strengthens the statement.
  - 3. Both I and II weaken the statement.
  - 4. Both I and II strengthen the statement.

Question ID : 75189711120

Option 1 ID : 75189744478

Option 2 ID : 75189744477

Option 3 ID : 75189744479

Option 4 ID : 75189744480

Status : Not Answered

Chosen Option : --

**Q.27** Which of the following statements is not true?

- Ans**
- 1. Potassium is least reactive in the reactivity series

2.

The reactivity series is a list of metals arranged in the order of their decreasing reactivities

3.

The metals in the middle of the reactivity series are moderately reactive.

4.

The metals high up in the reactivity series can be obtained from their compounds by electrolytic reduction.

Question ID : 7518973681

Option 1 ID : 75189714721

Option 2 ID : 75189714724

Option 3 ID : 75189714722

Option 4 ID : 75189714723

Status : Answered

Chosen Option : 1

Q.28 Which of the following materials is best suitable for making an electromagnet ?

- Ans
- 1. Soft iron
  - 2. Steel
  - 3. Aluminum
  - 4. Copper

Question ID : 75189711357  
Option 1 ID : 75189745428  
Option 2 ID : 75189745425  
Option 3 ID : 75189745426  
Option 4 ID : 75189745427  
Status : Answered  
Chosen Option : 1

Q.29 Find the value of  $[(12 \div \frac{4}{3}) \times \{6 \div 4 \times (\frac{12-7}{6})\}] \div \{4 \times 6 \div 3\}$ .

- Ans
- 1.  $1\frac{15}{32}$
  - 2.  $1\frac{11}{32}$
  - 3.  $1\frac{13}{32}$
  - 4.  $1\frac{17}{32}$

Question ID : 7518979900  
Option 1 ID : 75189739598  
Option 2 ID : 75189739599  
Option 3 ID : 75189739597  
Option 4 ID : 75189739600  
Status : Answered  
Chosen Option : 3

Q.30 If an object is kept at a distance of 50 cm from a convex lens of focal length 20 cm, then the image distance is:

- Ans
- 1. 33.3 cm
  - 2. 3.33 cm
  - 3. 333 cm
  - 4. 0.333 cm

Question ID : 75189711151  
Option 1 ID : 75189744604  
Option 2 ID : 75189744602  
Option 3 ID : 75189744603  
Option 4 ID : 75189744601  
Status : Answered  
Chosen Option : 1

Q.31 In normal circumstances, who usually heads the Municipal Corporation?

- Ans
- 1. Home Minister of the State
  - 2. Chief Minister
  - 3. Governor
  - 4. Mayor

Question ID : 75189710608  
Option 1 ID : 75189742432  
Option 2 ID : 75189742430  
Option 3 ID : 75189742431  
Option 4 ID : 75189742429  
Status : Answered  
Chosen Option : 4

Q.32 Under which of the following Articles of the Indian Constitution, Hindi is declared as an official language of the Union?

- Ans
- 1. Article 346
  - 2. Article 344
  - 3. Article 345
  - 4. Article 343

Question ID : 75189710551  
Option 1 ID : 75189742201  
Option 2 ID : 75189742203  
Option 3 ID : 75189742202  
Option 4 ID : 75189742204  
Status : Answered  
Chosen Option : 4

Q.33 The diagonals of a rhombus are 12 cm and 8 cm, respectively. The area of the rhombus (in  $\text{cm}^2$ ) is:

- Ans
- 1. 72
  - 2. 24
  - 3. 96
  - 4. 48

Question ID : 75189710018  
Option 1 ID : 75189740071  
Option 2 ID : 75189740069  
Option 3 ID : 75189740072  
Option 4 ID : 75189740070  
Status : Answered  
Chosen Option : 4

Q.34 If 26 January 2018 is a Friday, then what will be the day of the week on 29 January 2021?

- Ans
- 1. Friday
  - 2. Wednesday
  - 3. Monday
  - 4. Sunday

Question ID : 7518979154  
Option 1 ID : 75189736613  
Option 2 ID : 75189736616  
Option 3 ID : 75189736615  
Option 4 ID : 75189736614  
Status : Answered  
Chosen Option : 1

Q.35 Simplify the following expression:

$$\frac{\cos A}{1 + \sin A} + \frac{1 + \sin A}{\cos A}$$

- Ans
- 1.  $2 \sec A$
  - 2.  $1 + 2\sin A$
  - 3.  $2 \cos A$
  - 4.  $2 \sin A$

Question ID : 75189710048  
Option 1 ID : 75189740191  
Option 2 ID : 75189740192  
Option 3 ID : 75189740189  
Option 4 ID : 75189740190  
Status : Answered  
Chosen Option : 1

Q.36 Which of the following metals has an electronic configuration 2, 8, 4?

- Ans
- 1. Cl
  - 2. Ar
  - 3. Si
  - 4. P

Question ID : 75189710378  
Option 1 ID : 75189741512  
Option 2 ID : 75189741509  
Option 3 ID : 75189741510  
Option 4 ID : 75189741511  
Status : Answered  
Chosen Option : 3

**Q.37** The marked price of an article is ₹400 and successive discounts of 10% and 12% are offered on its sale. The selling price of the article is:

- Ans**
- 1. ₹313.80
  - 2. ₹323.80
  - 3. ₹316.80
  - 4. ₹306.80

Question ID : 7518979951  
Option 1 ID : 75189739802  
Option 2 ID : 75189739804  
Option 3 ID : 75189739803  
Option 4 ID : 75189739801  
Status : Answered  
Chosen Option : 3

**Q.38** Ritesh is 12 years older than the Mohit. 17 years ago, Ritesh's age was four times of Mohit's age. Mohit's present age (in years) is:

- Ans**
- 1. 24
  - 2. 27
  - 3. 21
  - 4. 18

Question ID : 7518979998  
Option 1 ID : 75189739991  
Option 2 ID : 75189739992  
Option 3 ID : 75189739990  
Option 4 ID : 75189739989  
Status : Answered  
Chosen Option : 3

**Q.39** Which of the following options is the closest approximate value which will come in place of question mark(?) in the following equation?

$$12.99 - 3.02 + 11.89 \times 9.19 = ?$$

- Ans**
- 1. 118
  - 2. 189
  - 3. 220
  - 4. 80

Question ID : 7518979879  
Option 1 ID : 75189739513  
Option 2 ID : 75189739514  
Option 3 ID : 75189739515  
Option 4 ID : 75189739516  
Status : Answered  
Chosen Option : 1

Q.40 In which of the following animals is sex NOT genetically determined?

- Ans
- 1. Shark
  - 2. Snakes
  - 3. Salmon
  - 4. Snails

Question ID : 75189710250  
Option 1 ID : 75189740999  
Option 2 ID : 75189740998  
Option 3 ID : 75189741000  
Option 4 ID : 75189740997  
Status : Not Answered  
Chosen Option : --

Q.41 If a milkman adds 4 l of water to 9 l of milk, then the amount of water he should add to 36 l of milk in order to maintain the same proportion of milk and water will be:

- Ans
- 1. 16 l
  - 2. 12 l
  - 3. 10 l
  - 4. 14 l

Question ID : 7518979238  
Option 1 ID : 75189736949  
Option 2 ID : 75189736951  
Option 3 ID : 75189736952  
Option 4 ID : 75189736950  
Status : Answered  
Chosen Option : 1

Q.42 Which of the following are NOT considered as biomedical wastes?

- Ans
- 1. Industrial wastes
  - 2. Medical wastes
  - 3. Animal wastes
  - 4. Food wastes

Question ID : 7518974480  
Option 1 ID : 75189717918  
Option 2 ID : 75189717919  
Option 3 ID : 75189717920  
Option 4 ID : 75189717917  
Status : Answered  
Chosen Option : 1

Q.43 When is Earth Day observed?

- Ans
- 1. April 1
  - 2. May 7
  - 3. April 22
  - 4. March 14

Question ID : 75189710587  
Option 1 ID : 75189742346  
Option 2 ID : 75189742348  
Option 3 ID : 75189742345  
Option 4 ID : 75189742347  
Status : Answered  
Chosen Option : 3

Q.44 The volume (in  $m^3$ ) of a cuboidal tank, whose dimensions are given as  $6\text{ m} \times 5\text{ m} \times 4\text{ m}$ , is:

- Ans
- 1. 120
  - 2. 40
  - 3. 80
  - 4. 30

Question ID : 75189710030  
Option 1 ID : 75189740117  
Option 2 ID : 75189740119  
Option 3 ID : 75189740118  
Option 4 ID : 75189740120  
Status : Answered  
Chosen Option : 1

Q.45 Refer to the following letter series and answer the question.

KDNCICLOASC SOPM CODKCVNDCMM

How many consonants are there in the given series between the letter that is fifth from the right end and the letter that is sixth from the left end of the given series?

- Ans
- 1. Eleven
  - 2. Eight
  - 3. Three
  - 4. Thirteen

Question ID : 7518978255  
Option 1 ID : 75189733019  
Option 2 ID : 75189733017  
Option 3 ID : 75189733018  
Option 4 ID : 75189733020  
Status : Answered  
Chosen Option : 1



Q.46 The greatest number, which divides 2000 and 2200 to leave 22 and 38 respectively as remainders, is:

- Ans
- 1. 36
  - 2. 42
  - 3. 39
  - 4. 46

Question ID : 7518979915

Option 1 ID : 75189739657

Option 2 ID : 75189739659

Option 3 ID : 75189739658

Option 4 ID : 75189739660

Status : Answered

Chosen Option : 4

Q.47 Siddharth leaves from his home and drives 24 km towards North, and then he turns right and drives 29 km. After that, he turns right again and drives 67 km. Then he turns left and drives 32 km. He finally turns left and drives 43 km to reach his destination. How far is Siddharth from his home?

- Ans
- 1. 61 km
  - 2. 62 km
  - 3. 72 km
  - 4. 74 km

Question ID : 75189710887

Option 1 ID : 75189743548

Option 2 ID : 75189743547

Option 3 ID : 75189743545

Option 4 ID : 75189743546

Status : Answered

Chosen Option : 1

Q.48 Who was the founder of Bank of Baroda from following?

- Ans
- 1. Maharaja Ganpatrao Gaekwad
  - 2. Maharaja Malharrao Gaekwad
  - 3. Maharaja Sayajirao Gaekwad III
  - 4. Maharaja Govindrao Gaekwad

Question ID : 7518977509

Option 1 ID : 75189730033

Option 2 ID : 75189730035

Option 3 ID : 75189730034

Option 4 ID : 75189730036

Status : Not Answered

Chosen Option : --

**Q.49** A sum of ₹7,500 gives a simple interest of ₹1,800 in 4 years. What is the rate of interest per annum?

- Ans**
- 1. 4%
  - 2. 6%
  - 3. 5%
  - 4. 3%

Question ID : 7518979101  
Option 1 ID : 75189736403  
Option 2 ID : 75189736401  
Option 3 ID : 75189736402  
Option 4 ID : 75189736404  
Status : Answered  
Chosen Option : 2

**Q.50** Select the option in which the numbers are related in the same way as are the numbers of the given sets.

(NOTE: Operations should be performed on the whole numbers without breaking down the numbers into its constituent digits.

E.g. 13 – Operations on 13 such as adding /deleting /multiplying etc. to 13 can be performed. Breaking down 13 into 1 and 3 and then performing mathematical operations on 1 and 3 is not allowed)

(9, 8, 15)

(4, 5, 11)

- Ans**
- 1. (8, 19, 10)
  - 2. (8, 9, 15)
  - 3. (11, 10, 17)
  - 4. (17, 13, 22)

Question ID : 7518979782  
Option 1 ID : 75189739125  
Option 2 ID : 75189739127  
Option 3 ID : 75189739128  
Option 4 ID : 75189739126  
Status : Not Answered  
Chosen Option : --

**Q.51** The difference between the ages of Radha and Murari is 12 years. Five years ago, the sum of their ages was 28 years. If Radha is older than Murari, find Murari's present age (in years).

- Ans**
- 1. 17
  - 2. 15
  - 3. 13
  - 4. 25

Question ID : 75189710003  
Option 1 ID : 75189740011  
Option 2 ID : 75189740010  
Option 3 ID : 75189740009  
Option 4 ID : 75189740012  
Status : Answered  
Chosen Option : 3

Q.52 If the volume of a sphere is divided by its surface area, the result is 9 cm. The radius (in cm) of the sphere is

- Ans
- 1. 27
  - 2. 81
  - 3. 4.5
  - 4. 18

Question ID : 75189710711  
Option 1 ID : 75189742844  
Option 2 ID : 75189742843  
Option 3 ID : 75189742842  
Option 4 ID : 75189742841  
Status : Answered  
Chosen Option : 1

Q.53 The value of  $4^2 - 3(8)^{2/3} + (16/9)^{1/2}$  is:

- Ans
- 1. 1
  - 2. 0
  - 3.  $3\frac{1}{3}$
  - 4.  $5\frac{1}{3}$

Question ID : 75189710618  
Option 1 ID : 75189742470  
Option 2 ID : 75189742469  
Option 3 ID : 75189742471  
Option 4 ID : 75189742472  
Status : Answered  
Chosen Option : 4

Q.54 A child is looking at a reflecting surface of a Christmas tree ball which has a diameter of 10.0 cm, and the child observes an image of his face that is half the real size. How far is the child's face from the ball?

- Ans
- 1. +5.0 cm
  - 2. -5.0 cm
  - 3. +2.5 cm
  - 4. -2.5 cm

Question ID : 75189711266  
Option 1 ID : 75189745061  
Option 2 ID : 75189745062  
Option 3 ID : 75189745063  
Option 4 ID : 75189745064  
Status : Not Answered  
Chosen Option : --

**Q.55** Three statements are given, followed by three conclusions numbered I, II and III. Assuming the statements to be true, even if they seem to be at variance with commonly known facts, decide which of the conclusions logically follow(s) from the statements.

Statements:

1. Some institutes are universities.
2. All schools are universities.
3. Some colleges are schools.

Conclusions:

- I. Some colleges are institutes.
- II. Some institutes are schools.
- III. Some colleges are universities.

- Ans**
- 1. Only conclusions II and III follow
  - 2. Only III follows
  - 3. Only conclusions I follows
  - 4. Only conclusions I and II follow

Question ID : 75189710774

Option 1 ID : 75189743094

Option 2 ID : 75189743095

Option 3 ID : 75189743093

Option 4 ID : 75189743096

Status : Answered

Chosen Option : 2

**Q.56** Consider the dispersion of a medium as D for a wavelength  $\lambda$ . The dispersion of the same medium for wavelength  $3\lambda$  will be:

- Ans**
- 1.  $\frac{D}{16}$
  - 2.  $\frac{D}{4}$
  - 3.  $\frac{D}{81}$
  - 4.  $\frac{D}{27}$

Question ID : 75189711299

Option 1 ID : 75189745194

Option 2 ID : 75189745193

Option 3 ID : 75189745196

Option 4 ID : 75189745195

Status : Not Answered

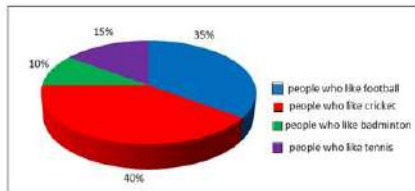
Chosen Option : --

Q.57 Which of the following Indian cricketers played his 100<sup>th</sup> Test Match in March 2022?

- Ans
- ✓ 1. Virat Kohli
  - ✗ 2. Shikhar Dhawan
  - ✗ 3. KL Rahul
  - ✗ 4. Rohit Sharma

Question ID : 7518976476  
Option 1 ID : 75189725904  
Option 2 ID : 75189725902  
Option 3 ID : 75189725903  
Option 4 ID : 75189725901  
Status : Not Answered  
Chosen Option : --

Q.58 According to a survey, the percentage of people who like different sports is shown in the following pie-chart. Blue represents people who like football, red represents people who like cricket, green represents people who like badminton, and purple represents people who like tennis. Study the pie-chart and answer the question.



The survey was to be conducted on 28,500 people. If only two-third of the total people took the survey, then how many people like badminton and tennis?

- Ans
- ✗ 1. 19,000
  - ✗ 2. 13,500
  - ✗ 3. 5,425
  - ✓ 4. 4,750

Question ID : 75189711253  
Option 1 ID : 75189745010  
Option 2 ID : 75189745012  
Option 3 ID : 75189745011  
Option 4 ID : 75189745009  
Status : Answered  
Chosen Option : 4

**Q.59** Two statements are given below, followed by four conclusions given in the options. Find out which conclusion is true based on the given statements.

Statement:  $P < Q < R = T, M < T = N$

- Ans**
- 1.  $M > Q$
  - 2.  $M < Q$
  - 3.  $M < R$
  - 4.  $P > M$

Question ID : 7518979726

Option 1 ID : 75189738901

Option 2 ID : 75189738902

Option 3 ID : 75189738903

Option 4 ID : 75189738904

Status : Answered

Chosen Option : 3

**Q.60** The average age of 40 students of a class is 15 years. If the age of the teacher is also included, the average age of the whole group becomes 16 years. The age (in years) of the teacher is:

- Ans**
- 1. 52
  - 2. 54
  - 3. 50
  - 4. 56

Question ID : 7518979967

Option 1 ID : 75189739867

Option 2 ID : 75189739866

Option 3 ID : 75189739868

Option 4 ID : 75189739865

Status : Answered

Chosen Option : 4

**Q.61** As per the All India Higher Education Survey (AISHE) report 2019-20, which state had the highest Gross Enrolment Ratio (GER) in Higher Education?

- Ans**
- 1. Uttar Pradesh
  - 2. Madhya Pradesh
  - 3. Andhra Pradesh
  - 4. Arunachal Pradesh

Question ID : 75189711093

Option 1 ID : 75189744369

Option 2 ID : 75189744370

Option 3 ID : 75189744372

Option 4 ID : 75189744371

Status : Not Answered

Chosen Option : --

**Q.62** Five years hence, the age of Jacob will be four times that of his son. Three years ago, Jacob's age was seven times that of his son. Their present ages are:

- Ans**
- 1. 59 and 21
  - 2. 59 and 11
  - 3. 69 and 11
  - 4. 49 and 21

Question ID : 7518979297  
Option 1 ID : 75189737186  
Option 2 ID : 75189737187  
Option 3 ID : 75189737188  
Option 4 ID : 75189737185  
Status : Answered  
Chosen Option : 2

**Q.63** In 2021, which country won the ICC T20 Cricket World Cup?

- Ans**
- 1. Australia
  - 2. West Indies
  - 3. England
  - 4. New Zealand

Question ID : 7518977137  
Option 1 ID : 75189728547  
Option 2 ID : 75189728546  
Option 3 ID : 75189728545  
Option 4 ID : 75189728548  
Status : Answered  
Chosen Option : 1

**Q.64** Which of the following numbers will replace the question mark (?) in the given series?  
15, 18, 24, 33, 45, ?

- Ans**
- 1. 42
  - 2. 37
  - 3. 60
  - 4. 36

Question ID : 75189710908  
Option 1 ID : 75189743631  
Option 2 ID : 75189743630  
Option 3 ID : 75189743632  
Option 4 ID : 75189743629  
Status : Answered  
Chosen Option : 3

Q.65 In India, coins are issued by the \_\_\_\_\_.

- Ans
- 1. Ministry of Home Affairs
  - 2. State Bank of India
  - 3. Reserve Bank of India
  - 4. Ministry of Finance

Question ID : 7518976816  
Option 1 ID : 75189727264  
Option 2 ID : 75189727262  
Option 3 ID : 75189727261  
Option 4 ID : 75189727263  
Status : Answered  
Chosen Option : 3

Q.66 The Industrial Policy Resolution of 1956 formed the basis of which of the following Five-Year Plans in India?

- Ans
- 1. Third Five-Year Plan
  - 2. Second Five-Year Plan
  - 3. Fifth Five-Year Plan
  - 4. Fourth Five-Year Plan

Question ID : 7518979420  
Option 1 ID : 75189737678  
Option 2 ID : 75189737677  
Option 3 ID : 75189737680  
Option 4 ID : 75189737679  
Status : Answered  
Chosen Option : 2

Q.67 If the sum of the immediate successors of two given numbers is 40 and the difference of the two given numbers is 6, then the two given numbers are \_\_\_\_\_.

- Ans
- 1. 24 and 14
  - 2. 22 and 16
  - 3. 25 and 13
  - 4. 22 and 18

Question ID : 75189710693  
Option 1 ID : 75189742769  
Option 2 ID : 75189742771  
Option 3 ID : 75189742772  
Option 4 ID : 75189742770  
Status : Answered  
Chosen Option : 2



Q.68 Which Veda is the largest and considered the most important of the collection, containing 1,028 hymns divided into 10 books called mandalas?

- Ans
- 1. Yajur Veda
  - 2. Rig Veda
  - 3. Atharva Veda
  - 4. Sama Veda

Question ID : 7518979395  
Option 1 ID : 75189737579  
Option 2 ID : 75189737577  
Option 3 ID : 75189737580  
Option 4 ID : 75189737578  
Status : Answered  
Chosen Option : 2

Q.69 What is the measure of each interior angle of a regular hexagon?

- Ans
- 1.  $90^\circ$
  - 2.  $120^\circ$
  - 3.  $110^\circ$
  - 4.  $150^\circ$

Question ID : 75189710034  
Option 1 ID : 75189740133  
Option 2 ID : 75189740135  
Option 3 ID : 75189740134  
Option 4 ID : 75189740136  
Status : Answered  
Chosen Option : 2

Q.70 Which of the following is an example of an ovarian hormone?

- Ans
- 1. Testosterone
  - 2. Adrenalin
  - 3. Oestrogen
  - 4. Thyroxin

Question ID : 7518974429  
Option 1 ID : 75189717713  
Option 2 ID : 75189717716  
Option 3 ID : 75189717714  
Option 4 ID : 75189717715  
Status : Answered  
Chosen Option : 3

**Q.71** Read the given statements and conclusions carefully. Assuming that the information given in the statements is true, even if it appears to be at variance with commonly known facts, decide which of the given conclusions logically follows from the statements.

Statements:

Some chairs are TVs.

Some TVs are fans.

Some fans are buses.

Conclusions:

(I) Some buses are chairs.

(II) No bus is a chair.

- Ans**
- 1. Either conclusion I or II follows
  - 2. Neither conclusion I nor II follow
  - 3. Only conclusion II follows
  - 4. Only conclusion I follows

Question ID : 75189711002

Option 1 ID : 75189744008

Option 2 ID : 75189744007

Option 3 ID : 75189744006

Option 4 ID : 75189744005

Status : Answered

Chosen Option : 1

**Q.72** In a certain code language, 'SHAKE' is written as 'TKFRN' and 'JUICE' is written as 'KXNIN'. How will 'SWEET' be written in the same code language?

- Ans**
- 1. TZZLC
  - 2. TZJLC
  - 3. TTJLC
  - 4. TZJLK

Question ID : 7518979757

Option 1 ID : 75189739028

Option 2 ID : 75189739025

Option 3 ID : 75189739027

Option 4 ID : 75189739026

Status : Answered

Chosen Option : 2

**Q.73** This question is based on the following 3-letter words.

GYM HIP JAM LAC PIC

If the first letter of all the words is changed to the following letter of the English alphabetical series, how many words will have more than one vowel? (Same or different Vowel)

- Ans**
- 1. Two
  - 2. One
  - 3. Three
  - 4. Zero

Question ID : 7518979004

Option 1 ID : 75189736015

Option 2 ID : 75189736014

Option 3 ID : 75189736016

Option 4 ID : 75189736013

Status : Answered

Chosen Option : 2

**Q.74** Refer to the following letter and symbol series and answer the question.

(Left) Z # U \* Y S K W P Q @ G & A % J B L % & H D # V (Right)

How many such consonants are there in the series which are immediately preceded and immediately followed by a symbol?

- Ans**
- 1. Four
  - 2. Five
  - 3. Three
  - 4. Two

Question ID : 75189710854

Option 1 ID : 75189743415

Option 2 ID : 75189743416

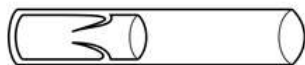
Option 3 ID : 75189743414

Option 4 ID : 75189743413

Status : Answered

Chosen Option : 4

Q.75 The following diagram shows which component of the human circulatory system?



- Ans
- 1. Aorta
  - 2. Vein
  - 3. Capillary
  - 4. Artery

Question ID : 75189710096

Option 1 ID : 75189740384

Option 2 ID : 75189740382

Option 3 ID : 75189740383

Option 4 ID : 75189740381

Status : Not Answered

Chosen Option : --

Q.76 \_\_\_\_\_ is a festival of the tribal population of Jharkhand.

- Ans
- 1. Bushu
  - 2. Sarhul
  - 3. Yemshe
  - 4. Tuluni

Question ID : 7518978524

Option 1 ID : 75189734093

Option 2 ID : 75189734096

Option 3 ID : 75189734094

Option 4 ID : 75189734095

Status : Answered

Chosen Option : 2

Q.77 Name the chemist who arranged the elements with similar properties into groups in the year 1817.

- Ans
- 1. Mosley
  - 2. Newland
  - 3. Mendeleev
  - 4. J W Dobereiner

Question ID : 75189710380

Option 1 ID : 75189741517

Option 2 ID : 75189741519

Option 3 ID : 75189741518

Option 4 ID : 75189741520

Status : Answered

Chosen Option : 4

Q.78 A magnetic compass consists of:

- Ans
- 1. an aluminium pointer alone
  - 2. a tiny magnetic needle attached to an aluminium pointer
  - 3. a coil of a conductor
  - 4. a coil carrying conductor

Question ID : 75189711166  
Option 1 ID : 75189744662  
Option 2 ID : 75189744661  
Option 3 ID : 75189744663  
Option 4 ID : 75189744664  
Status : Answered  
Chosen Option : 2

Q.79 Which of the following is NOT an ionic compound?

- Ans
- 1.  $\text{CaCl}_2$
  - 2.  $\text{CO}_2$
  - 3.  $\text{NaCl}$
  - 4.  $\text{CaO}$

Question ID : 7518973491  
Option 1 ID : 75189713963  
Option 2 ID : 75189713962  
Option 3 ID : 75189713961  
Option 4 ID : 75189713964  
Status : Answered  
Chosen Option : 2

Q.80 Who among the following was one of the early leaders of the 'Prarthana Samaj' movement?

- Ans
- 1. Keshab Chandra Sen
  - 2. Balak Singh
  - 3. Swami Sahajanand
  - 4. Mahadev Gobind Ranade

Question ID : 7518979375  
Option 1 ID : 75189737498  
Option 2 ID : 75189737500  
Option 3 ID : 75189737499  
Option 4 ID : 75189737497  
Status : Not Answered  
Chosen Option : --

**Q.81** The different steps in the process of photosynthesis in plants are given below. Which option shows the correct sequence of the different steps in the process?

- a) Splitting of water molecule into hydrogen and oxygen
- b) Light energy converted into chemical energy
- c) Absorption of light energy by chlorophyll
- d) Carbon dioxide reduced to carbohydrates

- Ans**
- ✓ 1. c—b—a—d
  - ✗ 2. b—c—d—a
  - ✗ 3. d—c—a—b
  - ✗ 4. a—b—c—d

Question ID : 7518974529  
Option 1 ID : 75189718115  
Option 2 ID : 75189718114  
Option 3 ID : 75189718116  
Option 4 ID : 75189718113  
Status : Answered  
Chosen Option : 1

**Q.82** If the radius of curvature of a given convex mirror is 0.3 m, then the distance between the principal focus and the centre of curvature is:

- Ans**
- ✗ 1. 0.3 m
  - ✗ 2. 0.45 m
  - ✓ 3. 0.15 m
  - ✗ 4. 0.6 m

Question ID : 75189711140  
Option 1 ID : 75189744558  
Option 2 ID : 75189744559  
Option 3 ID : 75189744557  
Option 4 ID : 75189744560  
Status : Answered  
Chosen Option : 3

**Q.83** The product of two consecutive positive natural numbers is 72. The greater of the two numbers is:

- Ans**
- ✗ 1. 24
  - ✓ 2. 9
  - ✗ 3. 12
  - ✗ 4. 8

Question ID : 7518978738  
Option 1 ID : 75189734949  
Option 2 ID : 75189734951  
Option 3 ID : 75189734950  
Option 4 ID : 75189734952  
Status : Answered  
Chosen Option : 2

**Q.84** Five boxes, A, C, D, E and F, are kept one over the other, but not necessarily in the same order. D is kept immediately above E. F is kept third from the top. D is neither the top-most nor the bottom-most box. A is kept immediately below C. Which box is kept immediately below A?

- Ans**
- 1. F
  - 2. E
  - 3. D
  - 4. C

Question ID : 75189710764  
Option 1 ID : 75189743054  
Option 2 ID : 75189743056  
Option 3 ID : 75189743055  
Option 4 ID : 75189743053  
Status : Answered  
Chosen Option : 1

**Q.85** As per the Centre for Monitoring Indian Economy (CMIE), the rate of unemployment in urban areas was approximately \_\_\_\_\_ in January 2022.

- Ans**
- 1. 7.2
  - 2. 5.8
  - 3. 9.3
  - 4. 8.1

Question ID : 7518978505  
Option 1 ID : 75189734018  
Option 2 ID : 75189734019  
Option 3 ID : 75189734020  
Option 4 ID : 75189734017  
Status : Not Answered  
Chosen Option : --

**Q.86** The electric power consumed by an electric heater is found to be 500 W per unit time when it is connected to a 250 V source. The current drawn by the heater per unit time is:

- Ans**
- 1. 2 A
  - 2. 5 A
  - 3. 0.2 A
  - 4. 0.5 A

Question ID : 75189711163  
Option 1 ID : 75189744649  
Option 2 ID : 75189744652  
Option 3 ID : 75189744650  
Option 4 ID : 75189744651  
Status : Answered  
Chosen Option : 1

Q.87 What is the name of the version of Oxford–AstraZeneca COVID-19 vaccine in India?

- Ans
- 1. Covaxin
  - 2. Sputnik
  - 3. Covishield
  - 4. Sinovac

Question ID : 75189710524  
Option 1 ID : 75189742094  
Option 2 ID : 75189742095  
Option 3 ID : 75189742093  
Option 4 ID : 75189742096  
Status : Answered  
Chosen Option : 1

Q.88 A dealer claims to sell his goods at cost price but uses a weight that actually weighs 800 gm though 1 kg is written on it. Find his gain percentage.

- Ans
- 1. 18%
  - 2. 25%
  - 3. 15%
  - 4. 20%

Question ID : 75189710663  
Option 1 ID : 75189742650  
Option 2 ID : 75189742651  
Option 3 ID : 75189742652  
Option 4 ID : 75189742649  
Status : Answered  
Chosen Option : 2

Q.89 Ramesh invested a certain sum of money at 9% per annum simple interest. If he receives an interest of ₹20,250 after one year, the sum he invested is:

- Ans
- 1. ₹2,25,000
  - 2. ₹2,00,000
  - 3. ₹2,75,000
  - 4. ₹2,50,000

Question ID : 7518979937  
Option 1 ID : 75189739746  
Option 2 ID : 75189739745  
Option 3 ID : 75189739748  
Option 4 ID : 75189739747  
Status : Answered  
Chosen Option : 1



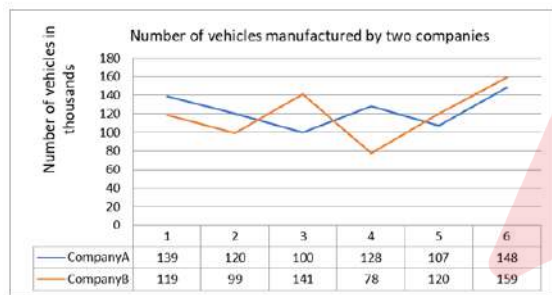
**Q.90** Eight people, P, Q, R, S, T, U, V and W, live on different floors of the same building. The lowermost floor in the building is numbered 1, the floor above it is numbered 2 and so on till the topmost floor is numbered 8.

Exactly two people live between P and T. Q lives immediately above R, on an even numbered floor. P lives on the topmost floor. S lives in one of the floors above T on an odd numbered floor. Only four people live between S and U. W lives on the lowermost floor. Who lives on the sixth floor?

- Ans**
- 1. W
  - 2. V
  - 3. U
  - 4. Q

Question ID : **75189710983**  
 Option 1 ID : **75189743931**  
 Option 2 ID : **75189743930**  
 Option 3 ID : **75189743929**  
 Option 4 ID : **75189743932**  
 Status : **Answered**  
 Chosen Option : 2

**Q.91** Study the given chart and answer the question that follows.  
 The numbers 1 to 6 represent the years from 2001 to 2006.



The production of company B in 2004 was approximately what percentage of the production of company A in the same year?

- Ans**
- 1. 99%
  - 2. 136%
  - 3. 172%
  - 4. 61%

Question ID : **75189711234**  
 Option 1 ID : **75189744935**  
 Option 2 ID : **75189744936**  
 Option 3 ID : **75189744934**  
 Option 4 ID : **75189744933**  
 Status : **Answered**  
 Chosen Option : 4

**Q.92** Select the option that represents the letters that, when placed from left to right in the same sequence in the blanks below, will complete the letter series.

BA\_DL\_AM\_LBA\_FLBA\_GL

- Ans**
- 1. MCEMM
  - 2. MMMCL
  - 3. MBMBL
  - 4. MBEMM

Question ID : 7518979838  
 Option 1 ID : 75189739352  
 Option 2 ID : 75189739351  
 Option 3 ID : 75189739350  
 Option 4 ID : 75189739349  
 Status : Answered  
 Chosen Option : 4

**Q.93** Select the option that is related to the fifth letter-cluster in the same way as the second letter-cluster is related to the first letter-cluster and the fourth letter-cluster is related to the third letter-cluster.

REPORT : SFQPSU :: WHITE : XIUF :: PROGRAM : ?

- Ans**
- 1. SQHPBNS
  - 2. QSPHSBN
  - 3. RSHPNSB
  - 4. SHPSNBS

Question ID : 7518979026  
 Option 1 ID : 75189736102  
 Option 2 ID : 75189736104  
 Option 3 ID : 75189736103  
 Option 4 ID : 75189736101  
 Status : Answered  
 Chosen Option : 2

**Q.94** From which country's constitution has Indian Constitution borrowed the feature of Fundamental Rights?

- Ans**
- 1. France
  - 2. Germany
  - 3. Japan
  - 4. USA

Question ID : 7518974098  
 Option 1 ID : 75189716391  
 Option 2 ID : 75189716389  
 Option 3 ID : 75189716392  
 Option 4 ID : 75189716390  
 Status : Answered  
 Chosen Option : 4

**Q.95** Amongst six friends A, B, C, D, E and F, each has a different height. F is taller than only one friend. A is taller than only three other friends. E is taller than D. B is taller than F but shorter than D. Who is the tallest among all the friends?

- Ans
- 1. A
  - 2. E
  - 3. C
  - 4. D

Question ID : 7518979119  
Option 1 ID : 75189736476  
Option 2 ID : 75189736474  
Option 3 ID : 75189736475  
Option 4 ID : 75189736473  
Status : Answered  
Chosen Option : 2

**Q.96** In the given reaction, iron has displaced:



- Ans
- 1. Cu
  - 2. O<sub>2</sub>
  - 3. SO<sub>2</sub>
  - 4. S

Question ID : 7518979618  
Option 1 ID : 75189738469  
Option 2 ID : 75189738471  
Option 3 ID : 75189738472  
Option 4 ID : 75189738470  
Status : Answered  
Chosen Option : 1

**Q.97** The median of the data using an empirical formula, when it is given that mode = 37.4 and mean = 30.5 is:

- Ans
- 1. 33.4
  - 2. 32.8
  - 3. 31.7
  - 4. 30.5

Question ID : 7518979275  
Option 1 ID : 75189737099  
Option 2 ID : 75189737097  
Option 3 ID : 75189737098  
Option 4 ID : 75189737100  
Status : Answered  
Chosen Option : 2

**Q.98** Three statements are given, followed by three conclusions numbered I, II and III. Assuming the statements to be true, even if they seem to be at variance with commonly known facts, decide which of the conclusions logically follow(s) from the statements.

Statements:

1. All products are usefuls.
2. No useful is tough.
3. All toughs are durables.

Conclusions:

- I. Some products are durables.
- II. Some durables are usefuls.
- III. All durables are toughs.

- Ans**
- 1. Only Conclusion II and III follow
  - 2. None of the conclusions follow
  - 3. Only Conclusion I and II follow
  - 4. Only Conclusion I and III follow

Question ID : 75189710772

Option 1 ID : 75189743086

Option 2 ID : 75189743088

Option 3 ID : 75189743087

Option 4 ID : 75189743085

Status : Answered

Chosen Option : 2

**Q.99** Eight houses M, N, O, P, Q, R, S, and T are located in a big campus. House O is 20 m west from house N which is 30 m south to house M. House M is 40 m west to house Q. House P is 50 m south to house Q. House R is at a distance of 15 m towards the north from house S. House T is located at 20 m to the east from house S. House R is 40 m west to house P. In which direction is house Q located from house R?

- Ans**
- 1. South-west
  - 2. North-west
  - 3. South-east
  - 4. North-east

Question ID : 7518978025

Option 1 ID : 75189732100

Option 2 ID : 75189732098

Option 3 ID : 75189732099

Option 4 ID : 75189732097

Status : Answered

Chosen Option : 4

**Q.100** The Ministry of Ayush launched the World's first multicentre phase III clinical trial in March 2022 that will be assessing Ayurveda's efficacy in \_\_\_\_\_ treatment.

- Ans**
- 1. Pernicious anaemia
  - 2. Rheumatoid arthritis
  - 3. Multiple sclerosis
  - 4. Celiac disease

Question ID : 7518977449  
Option 1 ID : 75189729796  
Option 2 ID : 75189729795  
Option 3 ID : 75189729794  
Option 4 ID : 75189729793  
Status : Not Answered  
Chosen Option : --

