



रेल भर्ती बोर्ड / RAILWAY RECRUITMENT BOARDS
सी ई एन आर आर सी - ०१/२०१९ - CEN RRC - 01/2019



Roll Number	
Candidate Name	
Test Center Name	iON Digital Zone iDZ Kuberpur
Test Date	17/09/2022
Test Time	9:00 AM - 10:30 AM
Subject	Level 1

* Note

Correct Answer will carry 1 mark per Question.

Incorrect Answer will carry 1/3 Negative mark per Question.

- Options shown in green color with a tick icon are correct.
- Chosen option on the right of the question indicates the option selected by the candidate.

Section : Level 1

Q.1 Which of the following is NOT a constitutional body of the Government of India?

- Ans
- 1. Comptroller and Auditor General
 - 2. NITI Aayog
 - 3. Election Commission
 - 4. Union Public Service Commission

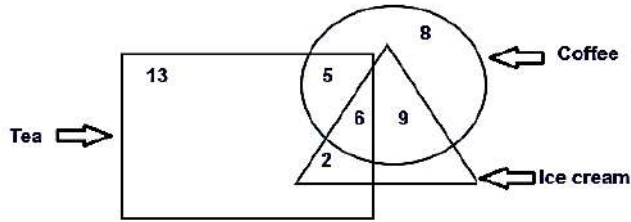
Question ID : 7518974293
Option 1 ID : 75189717171
Option 2 ID : 75189717169
Option 3 ID : 75189717172
Option 4 ID : 75189717170

Status : Answered

Chosen Option : 2

Q.2 Study the given diagram carefully and answer the question that follows.

The numbers in different sections indicate the number of people who have coffee, tea, and ice cream.



How many people have all three i.e. Ice cream, Tea as well as Coffee?

- Ans
- 1. 5
 - 2. 6
 - 3. 9
 - 4. 2

Question ID : 75189711007
 Option 1 ID : 75189744028
 Option 2 ID : 75189744026
 Option 3 ID : 75189744027
 Option 4 ID : 75189744025
 Status : Answered
 Chosen Option : 2

Q.3 Which of the following terms is used for the expression ' \bar{C} ' in the consumption function?

- Ans
- 1. Average propensity to consume
 - 2. Autonomous Consumption
 - 3. Marginal propensity to consume
 - 4. Induced consumption

Question ID : 7518977223
 Option 1 ID : 75189728891
 Option 2 ID : 75189728892
 Option 3 ID : 75189728890
 Option 4 ID : 75189728889
 Status : Not Answered
 Chosen Option : --

Q.4 Two wires are of the same length and the same resistance, but the ratio of their cross-sectional areas is 1 : 8. The ratio of their resistivities will be:

- Ans**
- 1. 8 : 3
 - 2. 1 : 8
 - 3. 3 : 8
 - 4. 8 : 1

Question ID : 75189711321
Option 1 ID : 75189745282
Option 2 ID : 75189745283
Option 3 ID : 75189745284
Option 4 ID : 75189745281
Status : Answered
Chosen Option : 2

Q.5 Which of the following terms will replace the question mark (?) in the given series to make it logically complete?

MSN15, QWR18, UAV21, YEZ24, ?

- Ans**
- 1. DNS31
 - 2. CID27
 - 3. DBC27
 - 4. CJL31

Question ID : 7518979144
Option 1 ID : 75189736576
Option 2 ID : 75189736575
Option 3 ID : 75189736573
Option 4 ID : 75189736574
Status : Answered
Chosen Option : 2

Q.6 In which of the following infections does the virus go to the immune system and damages its function?

- Ans**
- 1. Typhoid
 - 2. Malaria
 - 3. Cancer
 - 4. HIV-AIDS

Question ID : 75189710231
Option 1 ID : 75189740923
Option 2 ID : 75189740924
Option 3 ID : 75189740921
Option 4 ID : 75189740922
Status : Answered
Chosen Option : 4

Q.7 Most popularly celebrated in Maharashtra and Gujarat, the Parsi New Year is known as _____ and marks the beginning of the Iranian calendar.

- Ans
- 1. Losoong
 - 2. Bestu Varas
 - 3. Navreh
 - 4. Nowruz

Question ID : 75189710431
Option 1 ID : 75189741724
Option 2 ID : 75189741723
Option 3 ID : 75189741722
Option 4 ID : 75189741721
Status : Answered
Chosen Option : 4

Q.8 Which of the following components are necessary for photosynthesis?

- Ans
- 1. Oxygen, water, sunlight and chlorophyll
 - 2. Carbon dioxide, water, sunlight and oxygen
 - 3. Carbon dioxide, water, oxygen and chlorophyll
 - 4. Carbon dioxide, water, sunlight and chlorophyll

Question ID : 75189710150
Option 1 ID : 75189740599
Option 2 ID : 75189740598
Option 3 ID : 75189740600
Option 4 ID : 75189740597
Status : Answered
Chosen Option : 4

Q.9 If $x - \frac{1}{x} = 5$, then the value of $x^4 + \frac{1}{x^4}$ is:

- Ans
- 1. 827
 - 2. 727
 - 3. 627
 - 4. 927

Question ID : 7518978733
Option 1 ID : 75189734930
Option 2 ID : 75189734931
Option 3 ID : 75189734932
Option 4 ID : 75189734929
Status : Answered
Chosen Option : 2

Q.10 As of August 2022, under which Mission has the Government of India subsumed the Child Protection Services Scheme of 2017?

- Ans**
- 1. Poshan
 - 2. Vatsalya
 - 3. Bachpan
 - 4. Indradhanush

Question ID : 75189711084
Option 1 ID : 75189744334
Option 2 ID : 75189744335
Option 3 ID : 75189744333
Option 4 ID : 75189744336
Status : Answered
Chosen Option : 2

Q.11 Which of the following Articles of the Indian Constitution deals with the separation of judiciary from the executive?

- Ans**
- 1. 50
 - 2. 52
 - 3. 51
 - 4. 53

Question ID : 75189710597
Option 1 ID : 75189742385
Option 2 ID : 75189742387
Option 3 ID : 75189742386
Option 4 ID : 75189742388
Status : Answered
Chosen Option : 3

Q.12 Which of the following statements is INCORRECT?

- a) Methanoic acid is secreted by Nettle plant leaves.
- b) Acetic acid is found in vinegar.
- c) Tooth decay starts when mouth pH is lower than 5.5.
- d) Bacteria present in the mouth produces base by degradation of the remaining food particles present in the mouth.

- Ans**
- 1. b
 - 2. c
 - 3. d
 - 4. a

Question ID : 7518979641
Option 1 ID : 75189738562
Option 2 ID : 75189738563
Option 3 ID : 75189738564
Option 4 ID : 75189738561
Status : Answered
Chosen Option : 3

Q.13 Why should we human beings reduce our dependence on petroleum products?

- Ans
- 1. Petroleum is very expensive
 - 2. Petroleum needs to be refined
 - 3. Amount of petroleum is finite
 - 4. Petroleum needs to be imported

Question ID : 75189710136
Option 1 ID : 75189740541
Option 2 ID : 75189740544
Option 3 ID : 75189740542
Option 4 ID : 75189740543
Status : Answered
Chosen Option : 3

Q.14 What was the historic contribution of the community of Amrita Devi Bishnoi in Rajasthan in the 1700s?

- Ans
- 1.
They planted thousands of Khejri trees and stopped desertification of the region.
 - 2.
They dug several ponds to capture rainwater and stopped desertification of the region.
 - 3.
They laid down their lives to stop the cutting down of trees growing in their region.
 - 4.
They set up the first wildlife sanctuary to protect deer from hunters.

Question ID : 75189710139
Option 1 ID : 75189740554
Option 2 ID : 75189740553
Option 3 ID : 75189740555
Option 4 ID : 75189740556
Status : Answered
Chosen Option : 3

Q.15 A needle is placed at a distance $2.5f$ from the pole of a convex mirror of focal length f . The linear magnification is:

- Ans
- 1. $\frac{4}{7}$
 - 2. $\frac{3}{7}$
 - 3. $\frac{2}{7}$
 - 4. $\frac{1}{7}$

Question ID : 75189711270
Option 1 ID : 75189745080
Option 2 ID : 75189745079
Option 3 ID : 75189745078
Option 4 ID : 75189745077
Status : Answered
Chosen Option : 1

Q.16 If $16 : y :: y : 25$, find the positive value of y .

- Ans
- 1. 18
 - 2. 10
 - 3. 15
 - 4. 20

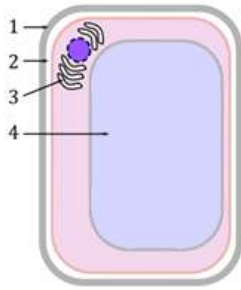
Question ID : 7518979931
Option 1 ID : 75189739723
Option 2 ID : 75189739721
Option 3 ID : 75189739722
Option 4 ID : 75189739724
Status : Answered
Chosen Option : 4

Q.17 If $5^{x+y} = 125$ and $5^{x-y} = 3125$, then the value of y is:

- Ans
- 1. -4
 - 2. -3
 - 3. -1
 - 4. -2

Question ID : 75189711185
Option 1 ID : 75189744739
Option 2 ID : 75189744740
Option 3 ID : 75189744737
Option 4 ID : 75189744738
Status : Answered
Chosen Option : 3

Q.18 Where can we find waste products in a plant cell shown in the following figure?



- Ans
- 1. Region shown by arrow 2
 - 2. Region shown by arrow 4
 - 3. Region shown by arrow 1
 - 4. Region shown by arrow 3

Question ID : 75189710073
 Option 1 ID : 75189740290
 Option 2 ID : 75189740292
 Option 3 ID : 75189740289
 Option 4 ID : 75189740291
 Status : Answered
 Chosen Option : 2

Q.19 Two statements are given below, followed by four conclusions given in the options. Find out which conclusion is true based on the given statements.

Statement: $A > C = B$, $M > N > O > Q = A$

- Ans
- 1. $B < M$
 - 2. $N < C$
 - 3. $C > N$
 - 4. $O < B$

Question ID : 7518979734
 Option 1 ID : 75189738933
 Option 2 ID : 75189738936
 Option 3 ID : 75189738934
 Option 4 ID : 75189738935
 Status : Answered
 Chosen Option : 3

Q.20 If each of the letters in the word MIRACLE is arranged in alphabetical order, then how many letters are there in the English alphabetical series between the letter which is third from the left and the one which is third from the right in the new arrangement?

- Ans**
- 1. Five
 - 2. Four
 - 3. Six
 - 4. Three

Question ID : 75189710836
Option 1 ID : 75189743343
Option 2 ID : 75189743342
Option 3 ID : 75189743344
Option 4 ID : 75189743341
Status : Answered
Chosen Option : 3

Q.21 Six boxes, A, B, C, P, U and V, are kept one over the other, but not necessarily in the same order. B is the top-most box, and C is immediately below B. There are only two boxes between B and V. There are only three boxes between P and C. There is only one box below U. Which box is kept immediately below U?

- Ans**
- 1. V
 - 2. C
 - 3. A
 - 4. P

Question ID : 75189710765
Option 1 ID : 75189743059
Option 2 ID : 75189743060
Option 3 ID : 75189743058
Option 4 ID : 75189743057
Status : Answered
Chosen Option : 1

Q.22 From the numbers 367, 489, 514, 632 and 728, if 2 is added to the first digit of each of the numbers, how many new numbers will be thus formed whose sum of all digits will be divisible by three?
(Example- 697 – First digit = 6, second digit = 9 and third digit = 7)

- Ans**
- 1. One
 - 2. Three
 - 3. four
 - 4. Two

Question ID : 7518979046
Option 1 ID : 75189736181
Option 2 ID : 75189736183
Option 3 ID : 75189736184
Option 4 ID : 75189736182
Status : Answered
Chosen Option : 4

Q.23 Which river of Rajasthan had dried up but revived with efforts of the villagers assisted by Tarun Bharat Sangh, an NGO?

- Ans**
- 1. Bhagirathi River
 - 2. Saraswati River
 - 3. Luni River
 - 4. Arvari River

Question ID : 75189710483

Option 1 ID : 75189741931

Option 2 ID : 75189741932

Option 3 ID : 75189741929

Option 4 ID : 75189741930

Status : Answered

Chosen Option : 2

Q.24 What is the quadratic equation whose roots are 2 and $-\frac{1}{2}$?

- Ans**
- 1. $2x^2 - 3x - 1 = 0$
 - 2. $2x^2 - 3x - 3 = 0$
 - 3. $2x^2 - 3x - 2 = 0$
 - 4. $2x^2 - 3x - 4 = 0$

Question ID : 75189710010

Option 1 ID : 75189740037

Option 2 ID : 75189740039

Option 3 ID : 75189740038

Option 4 ID : 75189740040

Status : Answered

Chosen Option : 3

Q.25 In a triangle PQR, $\angle P = 30^\circ$ and the straight line UV is drawn parallel to QR, intersecting PQ at S and PR at T. Which of the following is always true?

a) $\frac{PS}{PQ} = \frac{PT}{PR}$

b) $ST = \frac{QR}{2}$

c) The triangle PST is similar to the triangle PQR.

- Ans**
- 1. Only (a) and (c)
 - 2. Only (a) and (b)
 - 3. All of (a), (b) and (c)
 - 4. Only (a)

Question ID : 75189711218

Option 1 ID : 75189744872

Option 2 ID : 75189744871

Option 3 ID : 75189744870

Option 4 ID : 75189744869

Status : Answered

Chosen Option : 1

Q.26 The Board of Control for Cricket in India (BCCI) has finalised a Central Contracts list for the 2022-23 season for Indian cricketers. Which of the following senior players has lost the Grade A status in 2022?

- Ans**
- 1. Jasprit Bumrah
 - 2. Virat Kohli
 - 3. Rohit Sharma
 - 4. Chateshwar Pujara

Question ID : 7518979352
Option 1 ID : 75189737407
Option 2 ID : 75189737406
Option 3 ID : 75189737408
Option 4 ID : 75189737405
Status : Answered
Chosen Option : 4

Q.27 Ajay starts from his office and drives 3 km towards the east. He then takes a right turn, drives 4 km, turns left, and drives 5 km. He then takes a left turn and drives 3 km and stops at a shop. Which direction should he drive now in order to reach his office from that shop? (All turns are 90° turns only.)

- Ans**
- 1. South-east
 - 2. North-west
 - 3. South
 - 4. North

Question ID : 7518977373
Option 1 ID : 75189729492
Option 2 ID : 75189729490
Option 3 ID : 75189729491
Option 4 ID : 75189729489
Status : Answered
Chosen Option : 2

Q.28 The ratio of $9^{3.5} : 3^5$ is the same as:

- Ans**
- 1. 1 : 14
 - 2. 1 : 7
 - 3. 7 : 1
 - 4. 9 : 1

Question ID : 75189710643
Option 1 ID : 75189742571
Option 2 ID : 75189742570
Option 3 ID : 75189742569
Option 4 ID : 75189742572
Status : Answered
Chosen Option : 4

Q.29 The ages of Ram and Sita are in the ratio 5 : 8. Three years later the sum of their ages will be 58 years. The present age of Ram is:

- Ans**
- 1. 22 years
 - 2. 21 years
 - 3. 25 years
 - 4. 20 years

Question ID : 7518979284
Option 1 ID : 75189737133
Option 2 ID : 75189737134
Option 3 ID : 75189737136
Option 4 ID : 75189737135

Status : Answered

Chosen Option : 4

Q.30 At present, a man is 50 years old and his daughter is 22 years old. The man will be twice as old as his daughter after _____ years.

- Ans**
- 1. 9
 - 2. 5
 - 3. 18
 - 4. 6

Question ID : 75189710705
Option 1 ID : 75189742818
Option 2 ID : 75189742820
Option 3 ID : 75189742817
Option 4 ID : 75189742819

Status : Answered

Chosen Option : 4

Q.31 What are the main products in the process of neutralisation reaction?

- Ans**
- 1. N_2 and salt
 - 2. H_2O and salt
 - 3. CO_2 and salt
 - 4. O_2 and salt

Question ID : 75189710350
Option 1 ID : 75189741399
Option 2 ID : 75189741400
Option 3 ID : 75189741398
Option 4 ID : 75189741397

Status : Answered

Chosen Option : 2

Q.32 If the curved surface area of a right circular cylinder is 880 cm^2 and the diameter of its base is 7 cm, then the height (in cm) of the cylinder is _____.

Take $\pi = \frac{22}{7}$.

- Ans**
- 1. 40
 - 2. 20
 - 3. 28
 - 4. 14

Question ID : 75189710715

Option 1 ID : 75189742859

Option 2 ID : 75189742860

Option 3 ID : 75189742858

Option 4 ID : 75189742857

Status : Answered

Chosen Option : 1

Q.33 Which of the following reactions is NOT an example of neutralisation reaction?

- Ans**
- 1. $\text{CaO} + \text{H}_2\text{O} \rightarrow \text{Ca(OH)}_2$
 - 2. $\text{HNO}_3 + \text{KOH} \rightarrow \text{KNO}_3 + \text{H}_2\text{O}$
 - 3. $\text{Ca(OH)}_2 + \text{H}_2\text{CO}_3 \rightarrow \text{CaCO}_3 + 2\text{H}_2\text{O}$
 - 4. $\text{H}_3\text{PO}_4 + 3\text{KOH} \rightarrow \text{K}_3\text{PO}_4 + 3\text{H}_2\text{O}$

Question ID : 75189710351

Option 1 ID : 75189741403

Option 2 ID : 75189741402

Option 3 ID : 75189741401

Option 4 ID : 75189741404

Status : Answered

Chosen Option : 1

Q.34 In this question, a group of numbers/symbols is coded using letters as per the table given below and the conditions which follow. The correct combination of codes following the conditions is your answer.

Number/symbol	*	2	@	5	^	+	7	#	%	9	4
Letter code	J	P	A	F	D	N	R	K	M	Z	B

Conditions:

- (i) If both first and fourth elements are even numbers, the third element is to be coded as the code for the third element
- (ii) If both second and third elements are perfect squares, the third element is to be coded as the code for the second element

Which one of the following would be the code for %94#2 ?

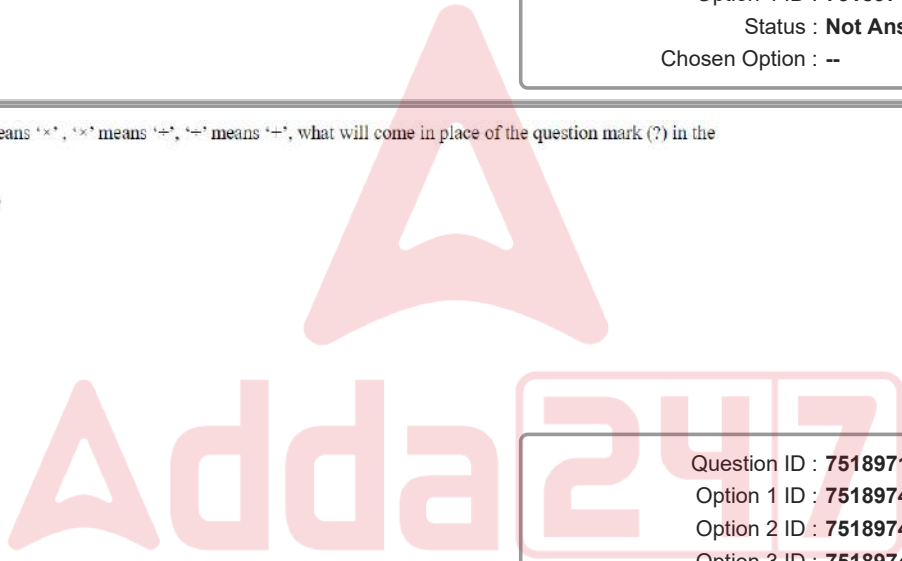
- Ans**
- 1. MZZKP
 - 2. MZBKP
 - 3. MBZPK
 - 4. MBZKP

Question ID : 75189710882
 Option 1 ID : 75189743526
 Option 2 ID : 75189743525
 Option 3 ID : 75189743528
 Option 4 ID : 75189743527
 Status : Not Answered
 Chosen Option : --

Q.35 If '+' means '-', '-' means 'x', 'x' means '+', '+' means '+', what will come in place of the question mark (?) in the following equation?

$$17 \div 3 - 2 + 12 \times 4 = ?$$

- Ans**
- 1. 21
 - 2. 15
 - 3. 20
 - 4. 18



Question ID : 75189710951
 Option 1 ID : 75189743803
 Option 2 ID : 75189743801
 Option 3 ID : 75189743804
 Option 4 ID : 75189743802
 Status : Answered
 Chosen Option : 3

Q.36 Five runners are standing in a straight row facing the east. Runner K is standing at the first position and M is at the end position. L is standing to the immediate left of N, and N is standing to the immediate left of M. P is standing third to the left of M. Who is standing to the immediate left of P?

- Ans**
- 1. K
 - 2. N
 - 3. L
 - 4. M

Question ID : 75189711224
Option 1 ID : 75189744894
Option 2 ID : 75189744895
Option 3 ID : 75189744896
Option 4 ID : 75189744893
Status : Answered
Chosen Option : 1

Q.37 The smallest 1-digit number to be added to the 6-digit number 234492 so that it is completely divisible by 11 is:

- Ans**
- 1. 6
 - 2. 7
 - 3. 5
 - 4. 4

Question ID : 7518979911
Option 1 ID : 75189739643
Option 2 ID : 75189739644
Option 3 ID : 75189739642
Option 4 ID : 75189739641
Status : Answered
Chosen Option : 3

Q.38 In March 2022, the Union Cabinet, chaired by Prime Minister Narendra Modi, has extended the Pradhan Mantri Garib Kalyan Anna Yojana till which period?

- Ans**
- 1. September 2025
 - 2. September 2024
 - 3. September 2023
 - 4. September 2022

Question ID : 7518979370
Option 1 ID : 75189737477
Option 2 ID : 75189737478
Option 3 ID : 75189737479
Option 4 ID : 75189737480
Status : Answered
Chosen Option : 4

Q.39 In India, the Integrated Wastelands Development Programme (IWDP) has been under implementation since

Ans

✓ 1. 1989-90

✗ 2. 2001-02

✗ 3. 1994-95

✗ 4. 1991-92

Question ID : 7518973899

Option 1 ID : 75189715593

Option 2 ID : 75189715596

Option 3 ID : 75189715595

Option 4 ID : 75189715594

Status : Answered

Chosen Option : 1

Q.40 Select the option that is related to the fifth number in the same way as the second number is related to the first number, the fourth number is related to the third number.

28 : 2 :: 126 : 4 :: 65 : ?

Ans ✗ 1. 6

✗ 2. 7

✗ 3. 5

✓ 4. 3

Question ID : 75189711232

Option 1 ID : 75189744926

Option 2 ID : 75189744927

Option 3 ID : 75189744928

Option 4 ID : 75189744925

Status : Answered

Chosen Option : 4

Q.41 Which of the following metals is the least reactive, as per the reactivity series of metals?

Ans ✓ 1. Lead

✗ 2. Zinc

✗ 3. Iron

✗ 4. Magnesium

Question ID : 75189710374

Option 1 ID : 75189741493

Option 2 ID : 75189741494

Option 3 ID : 75189741496

Option 4 ID : 75189741495

Status : Answered

Chosen Option : 1

Q.42 Dialysis is the procedure done to remove the waste products from the blood when the normal functioning of kidneys is affected. The steps of dialysis are given below but not in the proper order. Which option shows the correct sequence of these steps?

- a) Line to vein
- b) Patient's blood passed through a tank with dialysing fluid
- c) Line from artery
- d) Waste products from the blood pass into dialysing fluid
- e) Dialysing fluid has same osmotic pressure as blood except the wastes

- Ans**
- ✓ 1. c—b—e—d—a
 - ✗ 2. c—b—d—a—e
 - ✗ 3. a—c—d—b—e
 - ✗ 4. a—b—c—d—e

Question ID : 7518974610
 Option 1 ID : 75189718439
 Option 2 ID : 75189718440
 Option 3 ID : 75189718438
 Option 4 ID : 75189718437
 Status : Answered
 Chosen Option : 1

Q.43 A wholesaler sells a tin of oil at ₹540 and bears a loss of 10%. Now, if he decides to sell another tin of oil with same cost at ₹696, his profit percentage in the sale of second tin will be equal to:

- Ans**
- ✗ 1. 15%
 - ✓ 2. 16%
 - ✗ 3. 12%
 - ✗ 4. 18%

Question ID : 7518979246
 Option 1 ID : 75189736983
 Option 2 ID : 75189736984
 Option 3 ID : 75189736981
 Option 4 ID : 75189736982
 Status : Answered
 Chosen Option : 2

Q.44 Ashish sold a cow to Bipin for ₹5,000 by losing 20%. Bipin sold it to Kasim at that price which would have given Ashish a profit of 15%. What is Bipin's gain in this transaction?

- Ans**
- ✗ 1. ₹2,100.00
 - ✗ 2. ₹1,250.00
 - ✓ 3. ₹2,187.50
 - ✗ 4. ₹937.50

Question ID : 7518979245
 Option 1 ID : 75189736977
 Option 2 ID : 75189736980
 Option 3 ID : 75189736979
 Option 4 ID : 75189736978
 Status : Answered
 Chosen Option : 3

Q.45 Refer to the following letter series and answer the question that follows.

(Left) EBYTFRDCS WERFVYHNECSRFCARW (Right)

If every odd placed letter in the above series is dropped, which letter would appear at the seventh place from the left?

- Ans
- 1. H
 - 2. V
 - 3. Y
 - 4. F

Question ID : 7518977977
Option 1 ID : 75189731908
Option 2 ID : 75189731905
Option 3 ID : 75189731907
Option 4 ID : 75189731906
Status : Answered
Chosen Option : 2

Q.46 The mode of 5, 18, 6, 7, 6, 2, 3, 4, 24, 2, 7, 21, 2, 81 is:

- Ans
- 1. 6
 - 2. 2
 - 3. 81
 - 4. 7

Question ID : 75189710682
Option 1 ID : 75189742725
Option 2 ID : 75189742726
Option 3 ID : 75189742728
Option 4 ID : 75189742727
Status : Answered
Chosen Option : 2

Q.47 AD is the altitude of an isosceles triangle ABC in which $AB = AC$. Which of the following is true for AD?

- Ans
- 1. AD bisects $\angle A$
 - 2. AD bisects $\angle C$
 - 3. AD does not bisect $\angle A$
 - 4. AD bisects $\angle B$

Question ID : 75189710038
Option 1 ID : 75189740149
Option 2 ID : 75189740151
Option 3 ID : 75189740152
Option 4 ID : 75189740150
Status : Answered
Chosen Option : 3

Q.48 If the volume of a solid cube is 216 cm^3 , then its total surface area (in cm^2) is _____.

- Ans
- 1. 6
 - 2. 36
 - 3. 38
 - 4. 216

Question ID : 75189710718
Option 1 ID : 75189742870
Option 2 ID : 75189742869
Option 3 ID : 75189742872
Option 4 ID : 75189742871
Status : Answered
Chosen Option : 4

Q.49 In the given letter-cluster pairs, the first letter-cluster is related to the second letter-cluster following a certain logic. Study the given pairs carefully, and from the given options, select the pair that follows the same logic.

TSRA : ZIHG
OLEV : EVOL

- Ans
- 1. KVRA : ZIEQ
 - 2. ARNI : RMIZ
 - 3. CRVF : VEIX
 - 4. JPMN : ONKQ

Question ID : 75189710904
Option 1 ID : 75189743615
Option 2 ID : 75189743616
Option 3 ID : 75189743614
Option 4 ID : 75189743613
Status : Answered
Chosen Option : 2

Q.50 Which of the following goals does NASA hope to achieve by launching the HelioSwarm research mission?

- Ans
- 1. Improving the understanding of the dynamics of the Sun
 - 2. Understanding the intense seasonal episodes of Pluto
 - 3. Improving the understanding of MARS
 - 4. Improving the understanding of Ionosphere

Question ID : 7518977154
Option 1 ID : 75189728616
Option 2 ID : 75189728613
Option 3 ID : 75189728614
Option 4 ID : 75189728615
Status : Answered
Chosen Option : 1

Q.51 Select the option that is related to the fifth number in the same way as the fourth number is related to the third number and the second number is related to the first number.

17 : 38 :: 23 : 50 :: 12 : ?

- Ans**
- 1. 35
 - 2. 28
 - 3. 33
 - 4. 39

Question ID : 7518979774
 Option 1 ID : 75189739096
 Option 2 ID : 75189739093
 Option 3 ID : 75189739094
 Option 4 ID : 75189739095
 Status : Answered
 Chosen Option : 2

Q.52 Six actors are sitting in a line facing the north. A is sitting at the first position, and G is sitting third to the right of A. H is sitting to the immediate right of G. F is sitting second to the right of A. L is sitting to the immediate right of A. S is sitting at the end of the line. Who is sitting to the immediate right of L?

- Ans**
- 1. S
 - 2. H
 - 3. G
 - 4. F

Question ID : 75189711225
 Option 1 ID : 75189744900
 Option 2 ID : 75189744898
 Option 3 ID : 75189744897
 Option 4 ID : 75189744899
 Status : Answered
 Chosen Option : 4

Q.53 Refer to the following letter, number, symbol series and answer the question.

(Left) E 5 % H V 7 8 L M # @ A 6 3 F & S 4 Z (Right)

How many such letters are there which are immediately preceded by a letter and also immediately followed by a number?

- Ans**
- 1. 1
 - 2. 0
 - 3. 2
 - 4. 3

Question ID : 7518979169
 Option 1 ID : 75189736674
 Option 2 ID : 75189736673
 Option 3 ID : 75189736675
 Option 4 ID : 75189736676
 Status : Answered
 Chosen Option : 1

Q.54 If three resistors of $3\ \Omega$, $2\ \Omega$ and $6\ \Omega$ are connected in series combination with a $9\ \text{V}$ battery, then the potential difference across the $6\ \Omega$ resistor will be:

- Ans**
- 1. $9\ \text{V}$
 - 2. $2.4\ \text{V}$
 - 3. $1.6\ \text{V}$
 - 4. $4.9\ \text{V}$

Question ID : 7518979558
Option 1 ID : 75189738229
Option 2 ID : 75189738231
Option 3 ID : 75189738232
Option 4 ID : 75189738230
Status : Answered
Chosen Option : 4

Q.55 A number is increased by 30% and then decreased by 40% . The net increase or decrease percentage is:

- Ans**
- 1. 44% decrease
 - 2. 22% decrease
 - 3. 32% increase
 - 4. 34% increase

Question ID : 7518979224
Option 1 ID : 75189736893
Option 2 ID : 75189736895
Option 3 ID : 75189736894
Option 4 ID : 75189736896
Status : Answered
Chosen Option : 2

Q.56 The functional group which has more than one oxygen atom is:

- Ans**
- 1. carboxylic acid
 - 2. Aldehyde
 - 3. Alcohol
 - 4. Ketone

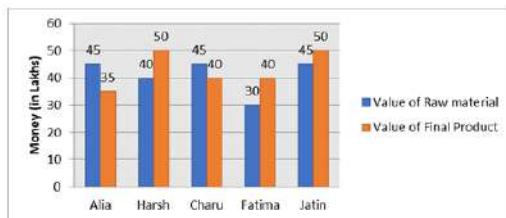
Question ID : 7518979601
Option 1 ID : 75189738404
Option 2 ID : 75189738403
Option 3 ID : 75189738401
Option 4 ID : 75189738402
Status : Answered
Chosen Option : 1

Q.57 The speed of a bus increases by 4 km/h after every two hours. If the bus covers a distance of 80 km in the first two hours, then the total distance covered by the bus in 10 hours will be:

- Ans**
- 1. 440 km
 - 2. 480 km
 - 3. 460 km
 - 4. 470 km

Question ID : 75189711196
 Option 1 ID : 75189744781
 Option 2 ID : 75189744784
 Option 3 ID : 75189744782
 Option 4 ID : 75189744783
 Status : Answered
 Chosen Option : 2

Q.58 The value of raw material and the value of final products manufactured by five people are shown in the following graph. Study the graph and answer the question.



Which manufacturer among the following has the maximum percentage increase in the value of final product as compared to the value of raw material, and by how much (approx.)?

- Ans**
- 1. Harsh, 33%
 - 2. Harsh, 25%
 - 3. Fatima, 25%
 - 4. Fatima, 33%

Question ID : 75189711250
 Option 1 ID : 75189745000
 Option 2 ID : 75189744997
 Option 3 ID : 75189744998
 Option 4 ID : 75189744999
 Status : Answered
 Chosen Option : 4

Q.59 The limit of 'Shishu' loan that is granted under Micro Units Development & Refinance Agency (MUDRA) is _____.

- Ans
- 1. up to ₹50 lakh
 - 2. ₹5 lakh to ₹10 lakh
 - 3. up to ₹50,000
 - 4. ₹50,000 to ₹5 lakh

Question ID : 7518978885

Option 1 ID : 75189735540

Option 2 ID : 75189735539

Option 3 ID : 75189735538

Option 4 ID : 75189735537

Status : Answered

Chosen Option : 4

Q.60 As per the report of Stockholm International Peace Research Institute (SIPRI) titled 'Trends in International Arms Transfers, 2021', India is the world's _____ arms importer globally.

- Ans
- 1. second largest
 - 2. largest
 - 3. fourth largest
 - 4. third largest

Question ID : 75189710568

Option 1 ID : 75189742270

Option 2 ID : 75189742269

Option 3 ID : 75189742272

Option 4 ID : 75189742271

Status : Answered

Chosen Option : 2

Q.61 How many molecules of hydrogen sulphide are required to balance the given chemical equation? $\text{SO}_2 + \text{H}_2\text{S} \rightarrow 3\text{S} + 2\text{H}_2\text{O}$

- Ans
- 1. One
 - 2. Two
 - 3. Four
 - 4. Three

Question ID : 75189710329

Option 1 ID : 75189741316

Option 2 ID : 75189741315

Option 3 ID : 75189741313

Option 4 ID : 75189741314

Status : Answered

Chosen Option : 2

Q.62 Avina has tuitions for six subjects - Maths, English, Computer Science, Physics, Biology and Chemistry, each on a different day of a week from Monday and ending on Saturday of the same week, but not necessarily in this order. Only three subject tuitions are scheduled between Computer Science and Physics tuitions. Only Chemistry tuition is scheduled between Maths and English tuitions. Biology tuition is on Monday. Physics tuition is on the day immediately after the Maths tuition which is on Friday. Which subject's tuition is scheduled on Wednesday?

- Ans**
- 1. Chemistry
 - 2. Physics
 - 3. English
 - 4. Biology

Question ID : 75189710752
Option 1 ID : 75189743008
Option 2 ID : 75189743005
Option 3 ID : 75189743006
Option 4 ID : 75189743007
Status : Answered
Chosen Option : 3

Q.63 Amongst six girls- A, C, F, H, J and K, each has a different height. They are standing in the ascending order of their heights, shortest in the front and tallest at the back. C is at the beginning of the queue. There is only one person taller than F. H is immediately taller than A. Both C and H are shorter than K. There is only one other person between A and C. If H and F are at the fourth and the fifth places from the start of the queue, respectively in the queue, then who is second from the beginning of the queue?

- Ans**
- 1. K
 - 2. J
 - 3. C
 - 4. A

Question ID : 75189710822
Option 1 ID : 75189743285
Option 2 ID : 75189743286
Option 3 ID : 75189743288
Option 4 ID : 75189743287
Status : Answered
Chosen Option : 2

Q.64 The Vikram Sarabhai Journalism Award is given in the field of _____.

- Ans**
- 1. Medical Science Research
 - 2. Health and Physical Education Research
 - 3. Atomic Energy Research
 - 4. Space Science, Technology and Research

Question ID : 7518977149
Option 1 ID : 75189728595
Option 2 ID : 75189728594
Option 3 ID : 75189728593
Option 4 ID : 75189728596
Status : Answered
Chosen Option : 4

Q.65 The first 'Home Rule League' was founded by _____.

- Ans
- 1. Chandra Shekhar Azad
 - 2. Bal Gangadhar Tilak
 - 3. Bipin Chandra Pal
 - 4. Surendranath Tagore

Question ID : 7518978845
Option 1 ID : 75189735377
Option 2 ID : 75189735378
Option 3 ID : 75189735380
Option 4 ID : 75189735379
Status : Answered
Chosen Option : 2

Q.66 In a triad the middle element has:

- Ans
- 1. double the atomic mass of the first element
 - 2. atomic mass equal to the of sum of the first and third elements
 - 3. double the atomic mass of the third element
 - 4. average atomic mass of the first and third elements

Question ID : 7518979673
Option 1 ID : 75189738689
Option 2 ID : 75189738692
Option 3 ID : 75189738690
Option 4 ID : 75189738691
Status : Answered
Chosen Option : 4

Q.67 Consider two wires of the same material, but the ratio of their cross-sectional areas is 2 : 5 and the ratio of their lengths is 7 : 5. If the same amount of current is flowing through them when they are connected to two batteries with voltages V_1 and V_2 , respectively, then $V_1 : V_2$ is:

- Ans
- 1. 2 : 7
 - 2. 2 : 5
 - 3. 7 : 5
 - 4. 7 : 2

Question ID : 75189711324
Option 1 ID : 75189745293
Option 2 ID : 75189745294
Option 3 ID : 75189745296
Option 4 ID : 75189745295
Status : Answered
Chosen Option : 4

Q.68 The magnitude of force that acts on the arms of an armature is the maximum when the length of the arms are:

- Ans**
- 1. 45° to the magnetic field
 - 2. perpendicular to the magnetic field
 - 3. 60° to the magnetic field
 - 4. parallel to the magnetic field

Question ID : 75189711368

Option 1 ID : 75189745470

Option 2 ID : 75189745471

Option 3 ID : 75189745472

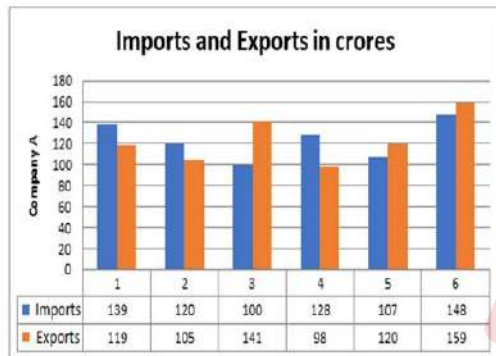
Option 4 ID : 75189745469

Status : Answered

Chosen Option : 2

Q.69 The given bar graph shows the exports and imports of Company A over a period of time. Study the bar graph and answer the question that follows.

The numbers 1 to 6 in the graph represent the years from 2001 to 2006.



For how many years are the exports at least 10% higher than the imports?

- Ans**
- 1. 1
 - 2. 2
 - 3. 4
 - 4. 3

Question ID : 75189711236

Option 1 ID : 75189744941

Option 2 ID : 75189744942

Option 3 ID : 75189744944

Option 4 ID : 75189744943

Status : Answered

Chosen Option : 2

Q.70 A commutator is used to change the direction of current in the coil of _____.

- Ans
- 1. AC generator only
 - 2. DC motor and DC generator both
 - 3. DC Motor Only
 - 4. DC generator only

Question ID : 75189711364
Option 1 ID : 75189745453
Option 2 ID : 75189745454
Option 3 ID : 75189745456
Option 4 ID : 75189745455
Status : Answered
Chosen Option : 3

Q.71 Which of the following numbers will replace the question mark (?) in the given series?

48, 52, 26, 30, 15, ?

- Ans
- 1. 19
 - 2. 18
 - 3. 20
 - 4. 17

Question ID : 75189710911
Option 1 ID : 75189743643
Option 2 ID : 75189743642
Option 3 ID : 75189743644
Option 4 ID : 75189743641
Status : Answered
Chosen Option : 1

Q.72 Eight boxes, J, K, L, M, N, O, P and Q, are kept in a vertical pattern, one over the other (but not necessarily in the same order). L is placed at the bottommost position. Q is at the third place from the top and N is just below J. Only two boxes are placed between Q and M. K is placed somewhere between M and N and O is just below Q. Which box is placed at the second position from the bottom?

- Ans
- 1. N
 - 2. J
 - 3. M
 - 4. P

Question ID : 75189710989
Option 1 ID : 75189743954
Option 2 ID : 75189743955
Option 3 ID : 75189743953
Option 4 ID : 75189743956
Status : Answered
Chosen Option : 4

Q.73 Read the given statement and the arguments carefully and select the appropriate answer from the given options.

Statement:

India still needs gender equality programmes to make people aware about this.

Arguments:

- I. People still believe boys are better than girls.
- II. Gender discrimination has vanished from our society.

- Ans**
- 1. Both I and II strengthen the statement.
 - 2. Both I and II weaken the statement.
 - 3. II weakens while I strengthens the statement.
 - 4. I weakens while II strengthens the statement.

Question ID : 75189711130

Option 1 ID : 75189744520

Option 2 ID : 75189744519

Option 3 ID : 75189744518

Option 4 ID : 75189744517

Status : Answered

Chosen Option : 3

Q.74 Deomali Peak is in which of the following states of India?

- Ans**
- 1. Himachal Pradesh
 - 2. Odisha
 - 3. Rajasthan
 - 4. Karnataka

Question ID : 75189710584

Option 1 ID : 75189742334

Option 2 ID : 75189742333

Option 3 ID : 75189742335

Option 4 ID : 75189742336

Status : Answered

Chosen Option : 4

Q.75 Which of the following enzymes in the saliva breaks down starch which is a complex molecule to give simple sugar?

- Ans**
- 1. Salivary trypsin
 - 2. Salivary amylase
 - 3. Salivary lipase
 - 4. Salivary pepsin

Question ID : 75189710179

Option 1 ID : 75189740716

Option 2 ID : 75189740713

Option 3 ID : 75189740715

Option 4 ID : 75189740714

Status : Answered

Chosen Option : 2

Q.76 The value of $20 - [12 - \{14 - (12 - \overline{16 - 10})\}]$ is:

- Ans
- 1. 8
 - 2. 10
 - 3. 16
 - 4. 20

Question ID : 75189710615
 Option 1 ID : 75189742457
 Option 2 ID : 75189742460
 Option 3 ID : 75189742459
 Option 4 ID : 75189742458
 Status : Not Answered
 Chosen Option : --

Q.77 As of March 2022, who is the Union Minister of Rural Development & Panchayati Raj?

- Ans
- 1. Mansukh L Mandaviya
 - 2. Pralhad Joshi
 - 3. Dharmendra Pradhan
 - 4. Giriraj Singh

Question ID : 75189710610
 Option 1 ID : 75189742440
 Option 2 ID : 75189742439
 Option 3 ID : 75189742437
 Option 4 ID : 75189742438
 Status : Answered
 Chosen Option : 4

Q.78 Refer to the following letter, number, symbol series and answer the question that follows.

(Left) 4#O\$5TF8%U2PA&F03@T4¶I#H (Right)

How many such symbols are there in the above series each of which is immediately followed by a vowel and also immediately preceded by a number?

- Ans
- 1. 4
 - 2. 3
 - 3. 2
 - 4. 1

Question ID : 7518974994
 Option 1 ID : 75189719976
 Option 2 ID : 75189719975
 Option 3 ID : 75189719974
 Option 4 ID : 75189719973
 Status : Answered
 Chosen Option : 2

Q.79 Smaller particles scatter the light of _____ and _____ colour the most; on the other hand, larger particles scatter the light of _____ and _____ colour the most.

- Ans
- 1. violet, blue; red, orange
 - 2. violet, blue; green, yellow
 - 3. red, orange; violet, blue
 - 4. red, orange; green, yellow

Question ID : 75189711306
Option 1 ID : 75189745222
Option 2 ID : 75189745224
Option 3 ID : 75189745221
Option 4 ID : 75189745223
Status : Answered
Chosen Option : 3

Q.80 Suppose a human hair is $30.0 \mu\text{m}$ thick. If Reshmi uses a concave mirror of focal length 25 cm and obtains an image of the hair of 60 cm thickness, then the hair should be placed in front of the mirror at:

- Ans
- 1. 50 cm
 - 2. 60 cm
 - 3. 40 cm
 - 4. 25 cm

Question ID : 75189711265
Option 1 ID : 75189745058
Option 2 ID : 75189745060
Option 3 ID : 75189745059
Option 4 ID : 75189745057
Status : Not Answered
Chosen Option : --

Q.81 The discriminant of a quadratic equation is 0. The quadratic equation has:

- Ans
- 1. two equal real roots
 - 2. no real roots
 - 3. three distinct real roots
 - 4. two distinct real roots

Question ID : 75189710013
Option 1 ID : 75189740050
Option 2 ID : 75189740051
Option 3 ID : 75189740052
Option 4 ID : 75189740049
Status : Answered
Chosen Option : 2

Q.82 Three statements are given, followed by three conclusions numbered I, II and III. Assuming the statements to be true, even if they seem to be at variance with commonly known facts, decide which of the conclusions logically follow(s) from the statements.

Statements:

1. All cashews are jaggery.
2. No food is jaggery.
3. Some walnuts are food.

Conclusions:

- I. Some walnuts are cashews.
- II. Some walnuts are jaggery.
- III. No food is cashew.

- Ans**
- 1. Only conclusions I and II follow
 - 2. Only conclusion III follows
 - 3. All conclusions follow
 - 4. Only conclusions II and III follow

Question ID : 75189710776

Option 1 ID : 75189743101

Option 2 ID : 75189743104

Option 3 ID : 75189743103

Option 4 ID : 75189743102

Status : Answered

Chosen Option : 2

Q.83

The value of $\sqrt{1 + \left(\frac{1 - \tan A}{1 - \cot A}\right)^2}$ is:

- Ans**
- 1. $\tan A$
 - 2. $\cos A$
 - 3. $\cot A$
 - 4. $\sec A$

Question ID : 75189711220

Option 1 ID : 75189744879

Option 2 ID : 75189744877

Option 3 ID : 75189744878

Option 4 ID : 75189744880

Status : Answered

Chosen Option : 2

Q.84 Ramadan is the _____ month of the Islamic calendar and the holy month of fasting.

- Ans
- 1. eighth
 - 2. tenth
 - 3. ninth
 - 4. seventh

Question ID : 7518978534
Option 1 ID : 75189734134
Option 2 ID : 75189734136
Option 3 ID : 75189734135
Option 4 ID : 75189734133
Status : Answered
Chosen Option : 3

Q.85 The value of x in the proportion equation $5 : 12 :: 9 : x$ is:

- Ans
- 1. 20.6
 - 2. 20.4
 - 3. 21.4
 - 4. 21.6

Question ID : 7518979932
Option 1 ID : 75189739726
Option 2 ID : 75189739728
Option 3 ID : 75189739727
Option 4 ID : 75189739725
Status : Answered
Chosen Option : 4

Q.86 The state of Rajasthan regained its lost greenery due to which canal?

- Ans
- 1. Sirhind Canal
 - 2. Munak Canal
 - 3. Agra Canal
 - 4. Indira Gandhi Canal

Question ID : 7518974701
Option 1 ID : 75189718804
Option 2 ID : 75189718803
Option 3 ID : 75189718801
Option 4 ID : 75189718802
Status : Answered
Chosen Option : 4

Q.87 Which of the following numbers will replace the question mark (?) in the given series?

17, 19, 21, 19, 25, 19, ?

- Ans
- 1. 32
 - 2. 27
 - 3. 30
 - 4. 29

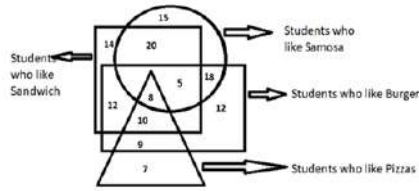
Question ID : 75189711243
Option 1 ID : 75189744970
Option 2 ID : 75189744971
Option 3 ID : 75189744972
Option 4 ID : 75189744969
Status : Answered
Chosen Option : 4

Q.88 The sum of the present ages of Ram, Nikhil and Aswin is 111 years. Ten years ago, the ratio of their ages was 2 : 3 : 4.
What is the present age (in years) of Nikhil?

- Ans
- 1. 37
 - 2. 16
 - 3. 28
 - 4. 44

Question ID : 75189710703
Option 1 ID : 75189742811
Option 2 ID : 75189742809
Option 3 ID : 75189742810
Option 4 ID : 75189742812
Status : Answered
Chosen Option : 1

Q.89 Study the given diagram carefully and answer the question. The numbers in different sections indicate the number of students surveyed regarding types of snacks they like to have in the college canteen.



How many students like both Samosa and Burger?

- Ans**
- 1. 31
 - 2. 13
 - 3. 18
 - 4. 23

Question ID : **75189710793**
 Option 1 ID : **75189743172**
 Option 2 ID : **75189743169**
 Option 3 ID : **75189743171**
 Option 4 ID : **75189743170**
 Status : **Answered**
 Chosen Option : 1

Q.90 The British introduced the concept of _____ in 1850, which significantly influenced the structure of the Indian economy.

- Ans**
- 1. waterways
 - 2. roadways
 - 3. railways
 - 4. airways



Question ID : **7518974059**
 Option 1 ID : **75189716236**
 Option 2 ID : **75189716235**
 Option 3 ID : **75189716234**
 Option 4 ID : **75189716233**
 Status : **Answered**
 Chosen Option : 3

Q.91 In this question, a group of numbers/symbols is coded using letters as per the table given below and the conditions which follow. The correct combination of codes following the conditions is your answer.

Number/	2	@	9	5	\$	&	3	%	#	7	+	4	8	6
Symbols														
Code	T	F	A	J	L	E	W	Q	D	P	R	B	U	S

Conditions:

(i) If the first element is a symbol and the last is a number, the codes for these two (the first and the last elements) are to be interchanged.

(ii) If the first element is an odd number and the last is an even number, the first and the last elements are to be coded as ☉

(iii) If both the second and the third elements are perfect squares, the third element is to be coded as the code for the second element.

Question: 7 % 9 # 2

- Ans**
- 1. ☉D☉QA
 - 2. ☉AD☉Q
 - 3. Q☉AD☉
 - 4. ☉QAD☉

Question ID : 7518979853
 Option 1 ID : 75189739411
 Option 2 ID : 75189739410
 Option 3 ID : 75189739412
 Option 4 ID : 75189739409
 Status : Not Answered
 Chosen Option : --

Q.92 Express $0.5\overline{323}$ in the form $\frac{p}{q}$, where p and q are integers and $q \neq 0$.

- Ans**
- 1. $\frac{5323}{9990}$
 - 2. $\frac{2661}{4990}$
 - 3. $\frac{2659}{4995}$
 - 4. $\frac{5333}{9990}$

Question ID : 75189711391
 Option 1 ID : 75189745561
 Option 2 ID : 75189745564
 Option 3 ID : 75189745563
 Option 4 ID : 75189745562
 Status : Answered
 Chosen Option : 3

Q.93 A group of numbers/symbols is coded using letters as per the table given below and the conditions which follow. The correct combination of codes following the conditions is your answer.

Number/ symbol	#	*	+	8	@	6	5	2	%	4	3	&	7	9
Code Letter	D	L	F	A	H	M	Q	N	C	X	W	G	T	R

Conditions:

- (i) If the first element is a symbol and the last element is a number, the codes for these two (the first and the last elements) are to be interchanged.
- (ii) If the first element is an odd number and the last element is an even number, the first and last elements are to be coded as ©.
- (iii) If both the second and third elements are perfect squares, the third element is to be coded as the code for the second element.

What will be the code for 3 & % 4 6 ?

- Ans**
- 1. WGCXM
 - 2. WQLT©
 - 3. ©GCX#
 - 4. ©GCX©

Question ID : 75189711058
 Option 1 ID : 75189744232
 Option 2 ID : 75189744229
 Option 3 ID : 75189744230
 Option 4 ID : 75189744231
 Status : Not Answered
 Chosen Option : --

Q.94 Which of the following groups in the Modern Periodic Table have NO metallic element?

- Ans**
- 1. 14
 - 2. 16
 - 3. 15
 - 4. 17



Question ID : 7518979704
 Option 1 ID : 75189738813
 Option 2 ID : 75189738815
 Option 3 ID : 75189738814
 Option 4 ID : 75189738816
 Status : Answered
 Chosen Option : 4

Q.95 When was Tamil declared a classical language of India?

- Ans 1. 2004
 2. 2006
 3. 2007
 4. 2005

Question ID : 75189710552
Option 1 ID : 75189742205
Option 2 ID : 75189742207
Option 3 ID : 75189742208
Option 4 ID : 75189742206
Status : Answered
Chosen Option : 1

Q.96 An astronaut from the moon's surface will observe the sky as:

- Ans 1. black
 2. white
 3. blue
 4. red

Question ID : 75189711307
Option 1 ID : 75189745228
Option 2 ID : 75189745226
Option 3 ID : 75189745225
Option 4 ID : 75189745227
Status : Answered
Chosen Option : 1

Q.97 An amount of ₹1,344 is divided among three persons in the ratio of 3 : 4 : 5. The difference between the largest and the smallest shares in the distribution is:

- Ans 1. ₹224
 2. ₹236
 3. ₹248
 4. ₹260

Question ID : 7518979928
Option 1 ID : 75189739709
Option 2 ID : 75189739710
Option 3 ID : 75189739711
Option 4 ID : 75189739712
Status : Answered
Chosen Option : 1

Q.98 Who among the following was appointed the head coach of Indian Cricket Team in November 2021?

- Ans
- 1. Rahul Dravid
 - 2. Anil Kumble
 - 3. VVS Laxman
 - 4. Sachin Tendulkar

Question ID : 7518976520
Option 1 ID : 75189726079
Option 2 ID : 75189726077
Option 3 ID : 75189726080
Option 4 ID : 75189726078
Status : Answered
Chosen Option : 1

Q.99 If '+' means '-', '-' means '+', '*' means '+', '+' means '*', what will come in place of the question mark (?) in the following equation?

$$2 - 4 \times 25 + 13 + 2 = ?$$

- Ans
- 1. -0.5
 - 2. 3
 - 3. 0.5
 - 4. -1

Question ID : 75189711078
Option 1 ID : 75189744312
Option 2 ID : 75189744310
Option 3 ID : 75189744311
Option 4 ID : 75189744309
Status : Answered
Chosen Option : 1

Q.100 Find the smallest natural number that can be divided by the first five 2-digit positive even numbers without leaving a remainder.

- Ans
- 1. 5340
 - 2. 5560
 - 3. 5040
 - 4. 5120

Question ID : 75189711396
Option 1 ID : 75189745583
Option 2 ID : 75189745584
Option 3 ID : 75189745581
Option 4 ID : 75189745582
Status : Answered
Chosen Option : 3