



रेल भर्ती बोर्ड / RAILWAY RECRUITMENT BOARDS
सी ई एन आर आर सी - ०१/२०१९ - CEN RRC - 01/2019



Roll Number	
Candidate Name	
Test Center Name	ION Digital Zone iDZ Anantapur
Test Date	05/09/2022
Test Time	9:00 AM - 10:30 AM
Subject	Level 1

* Note

Correct Answer will carry 1 mark per Question.
Incorrect Answer will carry 1/3 Negative mark per Question.

- Options shown in green color with a tick icon are correct.
- Chosen option on the right of the question indicates the option selected by the candidate.

Section : Level 1

Q.1 Select the option that is related to the fifth number in the same way as the second number is related to the first number and the fourth number is related to the third number.

(NOTE : Operations should be performed on the whole numbers, without breaking down the numbers into its constituent digits. E.g. 13 – Operations on 13 such as adding /deleting /multiplying etc. to 13 can be performed. Breaking down 13 into 1 and 3 and then performing mathematical operations on 1 and 3 is not allowed)

22 : 440 :: 14 : 168 :: 19 : ?

- Ans
- 1. 380
 - 2. 95
 - 3. 228
 - 4. 323

Question ID : 7518978054
Option 1 ID : 75189732213
Option 2 ID : 75189732216
Option 3 ID : 75189732215
Option 4 ID : 75189732214
Status : Answered
Chosen Option : 4

Q.2 Select the number from among the given options that can replace the question mark (?) in the following series.

12, 10, 11.5, 10.5, 11, 11, 10.5, 11.5, 10, ?

- Ans
- 1. 8.5
 - 2. 13
 - 3. 11
 - 4. 12

Question ID : 7518978043
Option 1 ID : 75189732169
Option 2 ID : 75189732172
Option 3 ID : 75189732170
Option 4 ID : 75189732171
Status : Answered
Chosen Option : 4

Q.3 Select the number from among the given options that can replace the question mark (?) in the following series.

1.6, 2.3, 3, 3.7, 4.4, 5.1, 5.8, 6.5, ?, 7.9, 8.6

- Ans
- 1. 7.4
 - 2. 7.2
 - 3. 7.3
 - 4. 7.1

Question ID : 7518978035
Option 1 ID : 75189732140
Option 2 ID : 75189732137
Option 3 ID : 75189732138
Option 4 ID : 75189732139
Status : Answered
Chosen Option : 2

Q.4 If 3 and -7 are the roots of a quadratic equation, then the quadratic equation is:

- Ans
- 1. $x^2 - 4x + 21 = 0$
 - 2. $x^2 - 4x - 21 = 0$
 - 3. $-x^2 + 4x + 21 = 0$
 - 4. $x^2 + 4x - 21 = 0$

Question ID : 7518976350
Option 1 ID : 75189725400
Option 2 ID : 75189725399
Option 3 ID : 75189725397
Option 4 ID : 75189725398
Status : Answered
Chosen Option : 4

Q.5 If the numerator of a fraction be increased by 10% and its denominator be reduced by 5%, then the fraction becomes $\frac{4}{5}$. Find the original fraction.

- Ans
- 1. $\frac{23}{55}$
 - 2. $\frac{38}{55}$
 - 3. $\frac{17}{25}$
 - 4. $\frac{19}{25}$

Question ID : 7518976049
Option 1 ID : 75189724195
Option 2 ID : 75189724196
Option 3 ID : 75189724194
Option 4 ID : 75189724193
Status : Answered
Chosen Option : 2

Q.6 The shorter side of a rectangle is 10 cm less than the longer side. The numerical value of its area is equal to 6 times the numerical value of its perimeter. What is the length (in cm) of its longer side?

- Ans**
- 1. 35
 - 2. 20
 - 3. 30
 - 4. 25

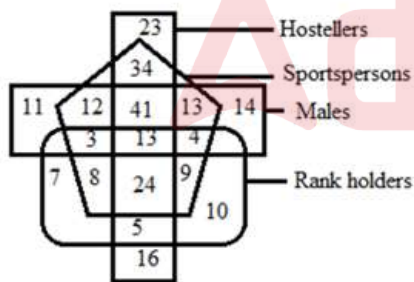
Question ID : 7518978459
 Option 1 ID : 75189733836
 Option 2 ID : 75189733833
 Option 3 ID : 75189733835
 Option 4 ID : 75189733834
 Status : Answered
 Chosen Option : 3

Q.7 Which of the following terms will replace the question mark (?) in the given series to make it logically complete?
 17KDP, 20TMY, 23CVH, 26LEQ, ?

- Ans**
- 1. 29NZW
 - 2. 29UNZ
 - 3. 27NZW
 - 4. 27UNZ

Question ID : 7518979137
 Option 1 ID : 75189736547
 Option 2 ID : 75189736546
 Option 3 ID : 75189736545
 Option 4 ID : 75189736548
 Status : Answered
 Chosen Option : 2

Q.8 Study the Venn diagram given below and answer the question that follows.



How many hosteller sportspersons are NOT males but rank holders?

- Ans**
- 1. 5
 - 2. 34
 - 3. 24
 - 4. 13

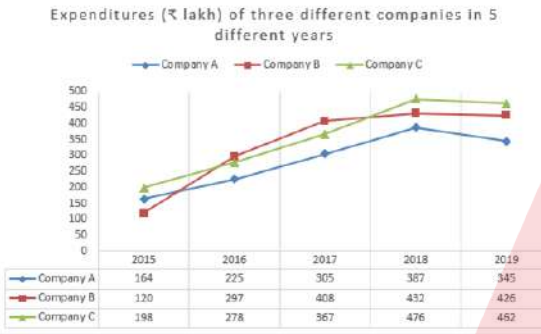
Question ID : 7518977927
 Option 1 ID : 75189731708
 Option 2 ID : 75189731707
 Option 3 ID : 75189731705
 Option 4 ID : 75189731706
 Status : Answered
 Chosen Option : 3

Q.9 Three pipes A, B and C can fill a tank in 5 hours, 8 hours and 12 hours, respectively. If all the pipes are opened at the same time, then the time taken to fill the tank is:

- Ans**
- 1. $4\frac{22}{49}$ hours
 - 2. $2\frac{22}{49}$ hours
 - 3. $5\frac{22}{49}$ hours
 - 4. $3\frac{22}{49}$ hours

Question ID : 7518978710
 Option 1 ID : 75189734838
 Option 2 ID : 75189734840
 Option 3 ID : 75189734837
 Option 4 ID : 75189734839
 Status : Answered
 Chosen Option : 2

Q.10 Study the graph and answer the question.



Total expenditure of all three companies together in the year 2018 was what percentage of the total expenditure of company B over all the years together?

- Ans**
- 1. 78.65%
 - 2. 75.86%
 - 3. 76.95%
 - 4. 77.32%

Question ID : 7518979057
 Option 1 ID : 75189736225
 Option 2 ID : 75189736228
 Option 3 ID : 75189736227
 Option 4 ID : 75189736226
 Status : Answered
 Chosen Option : 3

Q.11 A shopkeeper sells an item for ₹571.20 after giving two successive discounts of 20% and 15% on its marked price. Had he not given any discount, he would have earned a profit of 12%. What is the cost price (in ₹) of the item?

- Ans**
- 1. 700
 - 2. 720
 - 3. 750
 - 4. 780

Question ID : 7518978390
Option 1 ID : 75189733557
Option 2 ID : 75189733558
Option 3 ID : 75189733559
Option 4 ID : 75189733560
Status : Answered
Chosen Option : 3

Q.12 Jawaharlal Nehru classified which of the following Acts as 'a new charter of slavery'?

- Ans**
- 1. The Charter Act, 1853
 - 2. Government of India Act, 1919
 - 3. Government of India Act, 1935
 - 4. Rowlatt Act

Question ID : 7518977173
Option 1 ID : 75189728691
Option 2 ID : 75189728689
Option 3 ID : 75189728690
Option 4 ID : 75189728692
Status : Answered
Chosen Option : 3

Q.13 Which of the following companies launched India's first hydrogen fuel cell-powered electric car in March 2022?

- Ans**
- 1. Renault India Private Limited
 - 2. Hyundai Motor India Limited
 - 3. Toyota Kirloskar Motor Private Limited
 - 4. Tata Motors Limited

Question ID : 7518978495
Option 1 ID : 75189733979
Option 2 ID : 75189733978
Option 3 ID : 75189733980
Option 4 ID : 75189733977
Status : Answered
Chosen Option : 3

Q.14 Anu is four times as good as Binni in doing a work. Together they finish the same work in 12 hrs. In how many hrs will Anu alone finish the work?

- Ans**
- 1. 11 hrs
 - 2. 13 hrs
 - 3. 15 hrs
 - 4. 10 hrs

Question ID : 7518975656
Option 1 ID : 75189722622
Option 2 ID : 75189722623
Option 3 ID : 75189722624
Option 4 ID : 75189722621
Status : Answered
Chosen Option : 3

Q.15 The river when in its lower course while entering the sea splits into numerous smaller channels known as _____.

- Ans**
- 1. gorges
 - 2. arêtes
 - 3. distributaries
 - 4. tributaries

Question ID : 7518974254
Option 1 ID : 75189717015
Option 2 ID : 75189717016
Option 3 ID : 75189717014
Option 4 ID : 75189717013
Status : Answered
Chosen Option : 3

Q.16 If the mode of a data exceeds its mean by 16.2, then the mode exceeds the median by _____. (Use empirical formula to find the answer.)

- Ans**
- 1. 10.8
 - 2. 8.25
 - 3. 10.2
 - 4. 12.4

Question ID : 7518978425
Option 1 ID : 75189733699
Option 2 ID : 75189733697
Option 3 ID : 75189733698
Option 4 ID : 75189733700
Status : Not Answered
Chosen Option : --

Q.17 Which of the following Fundamental Rights stands violated in a hypothetical situation where an officer of the armed forces is not promoted because she is a woman?

- Ans
- 1. Right to Constitutional Remedies
 - 2. Right to Equality
 - 3. Right against Exploitation
 - 4. Right to Freedom

Question ID : 7518978592
Option 1 ID : 75189734367
Option 2 ID : 75189734366
Option 3 ID : 75189734365
Option 4 ID : 75189734368
Status : Answered
Chosen Option : 2

Q.18 If the simple interest on a certain sum for 8 years is $\frac{11}{25}$ of the sum, then the rate of interest per annum is:

- Ans
- 1. $7\frac{1}{2}\%$
 - 2. $6\frac{1}{2}\%$
 - 3. $8\frac{1}{2}\%$
 - 4. $5\frac{1}{2}\%$

Question ID : 7518978676
Option 1 ID : 75189734702
Option 2 ID : 75189734703
Option 3 ID : 75189734701
Option 4 ID : 75189734704
Status : Answered
Chosen Option : 4

Q.19 Which player among the following won individual silver medal in the women's 10 m air pistol event in International Shooting Sport Federation (ISSF) World Cup 2022?

- Ans
- 1. Shreya Aggarwal
 - 2. Esha Singh
 - 3. Manu Bhaker
 - 4. Rajshree Sancheti

Question ID : 7518977435
Option 1 ID : 75189729739
Option 2 ID : 75189729738
Option 3 ID : 75189729740
Option 4 ID : 75189729737
Status : Answered
Chosen Option : 2

Q.20 The position of how many letters will remain unchanged if each of the letters in the word DUPLICATE is arranged in alphabetical order?

- Ans**
- 1. 1
 - 2. 3
 - 3. 4
 - 4. 2

Question ID : 7518977963
Option 1 ID : 75189731849
Option 2 ID : 75189731851
Option 3 ID : 75189731852
Option 4 ID : 75189731850
Status : Answered
Chosen Option : 4

Q.21 Many of the excretory products produced by plants are useful to humans. Identify the product that is harmful for humans when inhaled.

- Ans**
- 1. Gums
 - 2. Oxygen
 - 3. Carbon dioxide
 - 4. Resins

Question ID : 7518974556
Option 1 ID : 75189718223
Option 2 ID : 75189718224
Option 3 ID : 75189718221
Option 4 ID : 75189718222
Status : Answered
Chosen Option : 3

Q.22 Some features of a prokaryotic cell are mentioned below. Select the INCORRECT option.

- Ans**
- 1. Membrane-bound cell organelles present
 - 2. Nuclear region known as nucleoid
 - 3. Single chromosome
 - 4. Very small in size

Question ID : 7518974565
Option 1 ID : 75189718259
Option 2 ID : 75189718260
Option 3 ID : 75189718258
Option 4 ID : 75189718257
Status : Answered
Chosen Option : 1

Q.23 In Economics, Total variable cost \div Units of output produced = _____.

- Ans
- 1. Average product
 - 2. Total product
 - 3. Average fixed cost
 - 4. Average variable cost

Question ID : 7518978558
Option 1 ID : 75189734232
Option 2 ID : 75189734231
Option 3 ID : 75189734229
Option 4 ID : 75189734230
Status : Answered
Chosen Option : 4

Q.24 Shri Lal Bahadur Shastri National Sanskrit University is located at _____.

- Ans
- 1. New Delhi
 - 2. Lucknow
 - 3. Jaipur
 - 4. Dehradun

Question ID : 7518977478
Option 1 ID : 75189729910
Option 2 ID : 75189729912
Option 3 ID : 75189729911
Option 4 ID : 75189729909
Status : Answered
Chosen Option : 4

Q.25 The Fundamental Duties of Indian citizens are found in which Article of the Constitution of India?

- Ans
- 1. Article 244
 - 2. Article 13
 - 3. Article 307
 - 4. Article 51A

Question ID : 7518977270
Option 1 ID : 75189729077
Option 2 ID : 75189729079
Option 3 ID : 75189729078
Option 4 ID : 75189729080
Status : Answered
Chosen Option : 4

Q.26 _____ refers to the cessation of menstruation.

- Ans
- 1. Menarche
 - 2. Hypermenorrhea
 - 3. Menses
 - 4. Menopause

Question ID : 7518974430
Option 1 ID : 75189717718
Option 2 ID : 75189717720
Option 3 ID : 75189717719
Option 4 ID : 75189717717
Status : Answered
Chosen Option : 2

Q.27 Tamanna started her walk at 6 a.m. On her way she saw a tree in front of her. She noted that the shadow of the tree was exactly to her left. In which direction was Tamanna walking?

- Ans
- 1. North
 - 2. South
 - 3. West
 - 4. East

Question ID : 7518978017
Option 1 ID : 75189732067
Option 2 ID : 75189732068
Option 3 ID : 75189732066
Option 4 ID : 75189732065
Status : Answered
Chosen Option : 1

Q.28 If L denotes \div , M denotes \times , P denotes $+$ and Q denotes $-$, then which of the following statements is true out of the options given below?

- Ans
- 1. $17 Q 22 M 18 P 13 L 7 = 473$
 - 2. $13 M 64 P 24 L 18 Q 6 = 36$
 - 3. $12 Q 13 L 15 M 19 P 23 = 96$
 - 4. $11 L 34 M 17 P 8 Q 3 = 42/4$

Question ID : 7518979051
Option 1 ID : 75189736202
Option 2 ID : 75189736201
Option 3 ID : 75189736204
Option 4 ID : 75189736203
Status : Not Answered
Chosen Option : --

Q.29 There are 43 cadets in a battalion, and the commander is planning for an straight row arrangement of cadets on stage, facing north. P is 18th from the left side of the row and Q is 31st from the right side of the row. Find the number of cadets standing between P and Q.

- Ans**
- 1. 3
 - 2. 6
 - 3. 4
 - 4. 5

Question ID : 7518978958
Option 1 ID : 75189735832
Option 2 ID : 75189735829
Option 3 ID : 75189735831
Option 4 ID : 75189735830
Status : Answered
Chosen Option : 4

Q.30 Refer to the following letter, number, symbol series and answer the question.

(Left) B 8 D 5 6 M S 8 # Z @ 7 K \$ 2 C B 4 5 N R (Right)

How many such numbers are there which are immediately preceded by a letter and also immediately followed by a number?

- Ans**
- 1. 1
 - 2. 3
 - 3. 4
 - 4. 2

Question ID : 7518979158
Option 1 ID : 75189736629
Option 2 ID : 75189736631
Option 3 ID : 75189736632
Option 4 ID : 75189736630
Status : Answered
Chosen Option : 2

Q.31 During fermentation in yeast, pyruvate is converted into which of the following products?

- Ans**
- 1. Water and carbon dioxide
 - 2. Glucose and carbon dioxide
 - 3. Ethanol and carbon dioxide
 - 4. Lactic acid and carbon dioxide

Question ID : 7518977795
Option 1 ID : 75189731179
Option 2 ID : 75189731177
Option 3 ID : 75189731178
Option 4 ID : 75189731180
Status : Answered
Chosen Option : 1

Q.32 Find the surface area of a sphere whose diameter is equal to 14 cm.

- Ans
- 1. 524 cm^2
 - 2. 1232 cm^2
 - 3. 616 cm^2
 - 4. 1048 cm^2

Question ID : 7518978787
Option 1 ID : 75189735146
Option 2 ID : 75189735147
Option 3 ID : 75189735148
Option 4 ID : 75189735148
Status : Answered
Chosen Option : 3

Q.33 If the armature of an AC generator is rotated faster, then:

- Ans
- 1. there is no change in induced current
 - 2. induced potential difference decreases
 - 3. induced current decreases
 - 4. induced potential difference increases

Question ID : 7518978162
Option 1 ID : 75189732648
Option 2 ID : 75189732645
Option 3 ID : 75189732647
Option 4 ID : 75189732646
Status : Answered
Chosen Option : 4

Q.34 Starting from point P, Sheetal walks 50 m towards the west. She takes a right turn and walks 20 m. Then she takes a left turn and walks 47 m. She takes a left turn again and walks 75 m. Again, she takes a left turn and walks 47 m. She takes a left turn again and walks 20 m. Then she takes a right turn and walks 50 m. Finally, she takes a left turn and walks 10 m to reach point Q. How far and in which direction is point P from point Q? (All turns are 90 degree turns only)

- Ans
- 1. 35 m due north
 - 2. 25 m due north
 - 3. 25 m due south
 - 4. 15 m due north

Question ID : 7518977700
Option 1 ID : 75189730799
Option 2 ID : 75189730797
Option 3 ID : 75189730798
Option 4 ID : 75189730800
Status : Answered
Chosen Option : 2

Q.35 The volume of a cuboid whose length, breadth and height are 3 cm, 4 cm and 5 cm, respectively, is:

- Ans
- 1. 60 cm^3
 - 2. 90 cm^3
 - 3. 80 cm^3
 - 4. 70 cm^3

Question ID : 7518978792
Option 1 ID : 75189735168
Option 2 ID : 75189735165
Option 3 ID : 75189735166
Option 4 ID : 75189735167
Status : Answered
Chosen Option : 1

Q.36 'e-RUPI' is a _____ based payments system to promote cashless transactions, launched by the National Payments Corporation of India (NPCI) in 2021.

- Ans
- 1. credit card
 - 2. mobile wallet
 - 3. debit card
 - 4. voucher

Question ID : 7518978551
Option 1 ID : 75189734202
Option 2 ID : 75189734203
Option 3 ID : 75189734204
Option 4 ID : 75189734201
Status : Answered
Chosen Option : 2

Q.37 The value of $\left(\frac{64}{25}\right)^{-\frac{3}{2}} \times \left(\frac{2}{5}\right)^4 \div \sqrt[5]{(32)^{-3}}$ is:

- Ans
- 1. $\frac{8}{25}$
 - 2. $\frac{1}{20}$
 - 3. $\frac{1}{5}$
 - 4. $\frac{2}{5}$

Question ID : 7518978345
Option 1 ID : 75189733379
Option 2 ID : 75189733380
Option 3 ID : 75189733377
Option 4 ID : 75189733378
Status : Answered
Chosen Option : 2

Q.38 Consider the below statements and identify the correct answer.

Statement-I: Dobereiner made the first observations on platinum as a catalyst and discovered similar triads of elements which led to the development of the periodic table of elements.

Statement-II: JW Dobereiner was the professor of chemistry and pharmacy at the University of Jena.

- Ans**
- 1. Both the statements are false.
 - 2. Both the statements are true.
 - 3. Only statement I is true.
 - 4. Only statement II is true.

Question ID : 7518973703
Option 1 ID : 75189714810
Option 2 ID : 75189714809
Option 3 ID : 75189714811
Option 4 ID : 75189714812
Status : Answered
Chosen Option : 1

Q.39 Consider the following statements about a fuse wire:

- (a) It is connected in series with a device.
- (b) It is made of a material of low melting point.

Which of the above statements is/are correct?

- Ans**
- 1. Both (a) and (b)
 - 2. Neither (a) nor (b)
 - 3. Only (b)
 - 4. Only (a)

Question ID : 7518976702
Option 1 ID : 75189726807
Option 2 ID : 75189726808
Option 3 ID : 75189726806
Option 4 ID : 75189726805
Status : Answered
Chosen Option : 1

Q.40 The current population of a town is 15,625. It increases by 8% and 12% in two successive years but decreases by 22% in the third year. What is the population of the town at the end of the third year?

- Ans**
- 1. 14,042
 - 2. 15,120
 - 3. 13,230
 - 4. 14,742

Question ID : 7518978359
Option 1 ID : 75189733436
Option 2 ID : 75189733435
Option 3 ID : 75189733433
Option 4 ID : 75189733434
Status : Answered
Chosen Option : 4

Q.41 Which of the following molecules has three carbon atoms in it?

- Ans 1. Pyruvic acid
 2. Carbon dioxide
 3. Ethanol
 4. Glucose

Question ID : 7518974390
Option 1 ID : 75189717557
Option 2 ID : 75189717558
Option 3 ID : 75189717560
Option 4 ID : 75189717559
Status : Answered
Chosen Option : 1

Q.42 Select the option that is related to the fifth number in the same way as the second number is related to the first number and the fourth number is related to the third number.

59 : 45 :: 46 : 24 :: 85 : ?

- Ans 1. 38
 2. 35
 3. 44
 4. 40

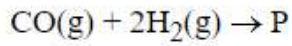
Question ID : 7518977726
Option 1 ID : 75189730901
Option 2 ID : 75189730904
Option 3 ID : 75189730902
Option 4 ID : 75189730903
Status : Answered
Chosen Option : 4

Q.43 Which of the following is the scheme of interest subsidy on educational loans for overseas studies for students belonging to the minority communities?

- Ans 1. Padho Videsh
 2. Nai Udaan
 3. Padho Pardesh
 4. Naya Savera

Question ID : 7518976782
Option 1 ID : 75189727125
Option 2 ID : 75189727128
Option 3 ID : 75189727126
Option 4 ID : 75189727127
Status : Not Answered
Chosen Option : --

Q.44 Consider the following chemical reaction.



Predict the product (P) of this reaction.

- Ans
- 1. $\text{CHO} + \text{H}_2$
 - 2. CH_3OH
 - 3. $\text{COOH} + \text{H}_2$
 - 4. $\text{CHO} + 2\text{H}_2$

Question ID : 7518973567
 Option 1 ID : 75189714265
 Option 2 ID : 75189714268
 Option 3 ID : 75189714266
 Option 4 ID : 75189714267
 Status : Answered
 Chosen Option : 2

Q.45 In a certain code language, the numbers/symbols are coded using letters as per the table given below and as per the given conditions.

Number/ Symbol	5	8	%	6	^	7	4	&	8	*	9	1	!	2	@	3	#
Code	A	S	D	F	G	H	J	K	L	M	N	B	V	C	X	Z	Q

Conditions:

- I. If the first element is an even number and the last is an odd number, the codes for the first and last elements are to be interchanged.
- II. If both the second and third elements are even numbers, the code for these two will be K.
- III. If the first element is a number and the last a symbol, the last element code is to be used for the first element also.

What will be the code for 8%7\$9@?

- Ans
- 1. LDHANL
 - 2. LDHANX
 - 3. XDHANL
 - 4. XDHANX

Question ID : 7518978010
 Option 1 ID : 75189732038
 Option 2 ID : 75189732037
 Option 3 ID : 75189732040
 Option 4 ID : 75189732039
 Status : Answered
 Chosen Option : 1

Q.46 Tamil, the official and most prominent language of Tamil Nadu, is a member of _____ language family.

- Ans
- 1. Indo-Aryan
 - 2. Dravidian
 - 3. Kra-Dai
 - 4. Munda

Question ID : 7518978860
Option 1 ID : 75189735439
Option 2 ID : 75189735437
Option 3 ID : 75189735440
Option 4 ID : 75189735438
Status : Answered
Chosen Option : 2

Q.47 The area around a magnet in which force is exerted by the magnet is called:

- Ans
- 1. pole
 - 2. magnetic material
 - 3. magnetic field
 - 4. magnetic lines

Question ID : 7518978147
Option 1 ID : 75189732585
Option 2 ID : 75189732588
Option 3 ID : 75189732587
Option 4 ID : 75189732586
Status : Answered
Chosen Option : 3

Q.48 The list price of a washing machine is ₹13,200. It is sold to a retailer after two successive discounts of 25% and 15%. The retailer wants to earn a profit of 20% on his cost after allowing a 25% discount (on its new list price) to the customer. At what price should he list the washing machine?

- Ans
- 1. ₹13,466
 - 2. ₹13,464
 - 3. ₹13,644
 - 4. ₹13,664

Question ID : 7518978392
Option 1 ID : 75189733567
Option 2 ID : 75189733566
Option 3 ID : 75189733565
Option 4 ID : 75189733568
Status : Not Answered
Chosen Option : --

Q.49 How many electrons are shared by one oxygen atom with a carbon atom in a carbon dioxide molecule?

- Ans
- 1. 1
 - 2. 4
 - 3. 2
 - 4. 3

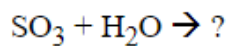
Question ID : 7518973391
Option 1 ID : 75189713561
Option 2 ID : 75189713564
Option 3 ID : 75189713562
Option 4 ID : 75189713563
Status : Answered
Chosen Option : 3

Q.50 If ABCD is a rhombus such that $\angle ACB = 40^\circ$, then $\angle ADB$ is:

- Ans
- 1. 40°
 - 2. 50°
 - 3. 60°
 - 4. 45°

Question ID : 7518978810
Option 1 ID : 75189735237
Option 2 ID : 75189735239
Option 3 ID : 75189735240
Option 4 ID : 75189735238
Status : Answered
Chosen Option : 2

Q.51 What is the product of the following combination reaction?



- Ans
- 1. H_2SO_4
 - 2. H_2O_2
 - 3. SO_2
 - 4. H_2S

Question ID : 7518973424
Option 1 ID : 75189713696
Option 2 ID : 75189713695
Option 3 ID : 75189713693
Option 4 ID : 75189713694
Status : Answered
Chosen Option : 1

Q.52 The cost of 3 pens and 2 pencils is ₹53 and the cost of 2 pens and 5 pencils ₹50. The cost of 5 pens and 3 pencils is:

- Ans
- 1. ₹72
 - 2. ₹81
 - 3. ₹87
 - 4. ₹95

Question ID : 7518978432
Option 1 ID : 75189733725
Option 2 ID : 75189733726
Option 3 ID : 75189733727
Option 4 ID : 75189733728
Status : Answered
Chosen Option : 3

Q.53 Reactions in which there is an exchange of ions between the reactants are called:

- Ans
- 1. exchange reactions
 - 2. displacement reactions
 - 3. precipitation reactions
 - 4. double displacement reactions

Question ID : 7518973589
Option 1 ID : 75189714356
Option 2 ID : 75189714353
Option 3 ID : 75189714355
Option 4 ID : 75189714354
Status : Answered
Chosen Option : 4

Q.54 Resistivity of material depends on _____.

- Ans
- 1. temperature
 - 2. length
 - 3. pressure
 - 4. thickness

Question ID : 7518978130
Option 1 ID : 75189732518
Option 2 ID : 75189732519
Option 3 ID : 75189732517
Option 4 ID : 75189732520
Status : Answered
Chosen Option : 1

Q.55 Due to atmospheric refraction, the apparent position of a star is slightly _____ than its actual position, when viewed from near the horizon, and this apparent position _____. This results in twinkling of stars.

- Ans**
- 1. higher, is stationary
 - 2. higher, keeps on changing
 - 3. lower, is stationary
 - 4. lower, keeps on changing

Question ID : 7518976661
 Option 1 ID : 75189726641
 Option 2 ID : 75189726642
 Option 3 ID : 75189726643
 Option 4 ID : 75189726644
 Status : Answered
 Chosen Option : 2

Q.56 The value of $\left(\frac{x^b}{x^c}\right)^{b+c} \times \left(\frac{x^c}{x^a}\right)^{c+a} \times \left(\frac{x^a}{x^b}\right)^{a+b}$ is equal to:

- Ans**
- 1. 3
 - 2. 2
 - 3. 1
 - 4. 0

Question ID : 7518978620
 Option 1 ID : 75189734477
 Option 2 ID : 75189734478
 Option 3 ID : 75189734479
 Option 4 ID : 75189734480
 Status : Answered
 Chosen Option : 3

Q.57 The corresponding sides of two similar triangles are in the ratio of 2: 3. If the area of the smaller triangle is 48 cm², then the area of the bigger triangle is:

- Ans**
- 1. 106 cm²
 - 2. 230 cm²
 - 3. 107 cm²
 - 4. 108 cm²

Question ID : 7518978807
 Option 1 ID : 75189735226
 Option 2 ID : 75189735225
 Option 3 ID : 75189735227
 Option 4 ID : 75189735228
 Status : Answered
 Chosen Option : 4

Q.58 Which of the following options is the closest approximate value which will come in place of question mark(?) in the following equation?

$$4.49 + 1.49 - 3.33 \times 3 + 4.49 = ?$$

- Ans
- 1. -2.5
 - 2. -4.5
 - 3. 2.5
 - 4. 4.5

Question ID : 7518978064
Option 1 ID : 75189732255
Option 2 ID : 75189732256
Option 3 ID : 75189732254
Option 4 ID : 75189732253
Status : Answered
Chosen Option : 1

Q.59 The three-tier system of Panchayati Raj was first recommended by the _____ in 1957.

- Ans
- 1. Ashok Mehta Committee
 - 2. Balwant Rai Mehta Committee
 - 3. GKV Rao Committee
 - 4. Singhvi Committee

Question ID : 7518978607
Option 1 ID : 75189734426
Option 2 ID : 75189734425
Option 3 ID : 75189734427
Option 4 ID : 75189734428
Status : Answered
Chosen Option : 2

Q.60 A train crosses a platform of length 200 metres in 40 seconds and a man in 20 seconds. The length of the train is:

- Ans
- 1. 300 metres
 - 2. 400 metres
 - 3. 200 metres
 - 4. 500 metres

Question ID : 7518978699
Option 1 ID : 75189734795
Option 2 ID : 75189734794
Option 3 ID : 75189734796
Option 4 ID : 75189734793
Status : Answered
Chosen Option : 3

Q.61 A ray of light in air is incident at an angle of 45° on the surface separating air from a medium of refractive index $\sqrt{2}$. The ray is refracted in the medium at an angle of ____.

- Ans**
- 1. 30°
 - 2. 15°
 - 3. 60°
 - 4. 45°

Question ID : 7518976615
Option 1 ID : 75189726458
Option 2 ID : 75189726457
Option 3 ID : 75189726460
Option 4 ID : 75189726459
Status : Answered
Chosen Option : 1

Q.62 If a $4\ \Omega$ resistor is connected to a 12 V battery, then the power consumed is:

- Ans**
- 1. 36 Watt
 - 2. 1.25 Watt
 - 3. 9 Watt
 - 4. 3 Watt

Question ID : 7518978146
Option 1 ID : 75189732583
Option 2 ID : 75189732584
Option 3 ID : 75189732582
Option 4 ID : 75189732581
Status : Answered
Chosen Option : 1

Q.63 Seven people, A, B, C, D, E, F and G, are sitting in a straight row, facing north. Only three people sit between A and D. Only two people sit to the left of A. G is not an immediate neighbour of D. G sits second to the right of E. F sits to the immediate right of C. Who sits at the extreme left end of the row?

- Ans**
- 1. G
 - 2. A
 - 3. E
 - 4. B

Question ID : 7518978176
Option 1 ID : 75189732704
Option 2 ID : 75189732703
Option 3 ID : 75189732701
Option 4 ID : 75189732702
Status : Not Answered
Chosen Option : --

Q.64 Where is India's only confirmed active volcano located, which lies about 135 km south of the Andaman and Nicobar Island's capital, Port Blair?

- Ans
- 1. Wilson Island
 - 2. Neill Island
 - 3. Havelock island
 - 4. Barren Island

Question ID : 7518978910
Option 1 ID : 75189735640
Option 2 ID : 75189735639
Option 3 ID : 75189735638
Option 4 ID : 75189735637
Status : Answered
Chosen Option : 4

Q.65 3 bags and 4 pens together cost ₹1,285, whereas 5 bags and 3 pens together cost ₹1,995. The cost of 2 bags exceeds the cost of 11 pens by:

- Ans
- 1. ₹310
 - 2. ₹350
 - 3. ₹390
 - 4. ₹300

Question ID : 7518978436
Option 1 ID : 75189733743
Option 2 ID : 75189733742
Option 3 ID : 75189733741
Option 4 ID : 75189733744
Status : Answered
Chosen Option : 1

Q.66 वैश्विक पीएमआई (Global MPI) 2021 के अनुसार, 109 देशों की सूची में भारत किस स्थान पर था?

- Ans
- 1. 87
 - 2. 99
 - 3. 66
 - 4. 96

Question ID : 7518977168
Option 1 ID : 75189728670
Option 2 ID : 75189728672
Option 3 ID : 75189728669
Option 4 ID : 75189728671
Status : Answered
Chosen Option : 2

Q.67 Given below is a statement followed by two possible conclusions I and II. Read the information carefully and select the correct option.

Statement:

Following the recession in country F, many smaller companies have decided to lay off all their employees who were on probation period of six months. As a result, a little over 48% of the employees of company M were laid off.

Which of the following can be concluded from the given information?

I. Company M had almost doubled in employee strength recently.

II. The layoffs due to recession are not performance based.

- Ans**
- 1. Only I can be concluded from the given information.
 - 2. Only II can be concluded from the given information.
 - 3. Both I and II can be concluded from the given information.
 - 4. Neither I nor II can be concluded from the given information.

Question ID : 7518979086

Option 1 ID : 75189736341

Option 2 ID : 75189736342

Option 3 ID : 75189736343

Option 4 ID : 75189736344

Status : Answered

Chosen Option : 3

Q.68 Who discovered the law of octaves and compared this to the octaves found in music?

- Ans**
- 1. John Newlands
 - 2. Dmitri Mendeléev
 - 3. Johann Döbereiner
 - 4. Johann Jakob Balmer

Question ID : 7518973706

Option 1 ID : 75189714821

Option 2 ID : 75189714823

Option 3 ID : 75189714822

Option 4 ID : 75189714824

Status : Answered

Chosen Option : 3

Q.69 Which of the following metals is obtained by electrolysis?

Na, Zn, Au, Ag, Mg, Al, Cu

- Ans**
- 1. Mg, Al, Cu
 - 2. Na, Zn, Au
 - 3. Au, Ag, Mg
 - 4. Na, Mg, Al

Question ID : 7518973680

Option 1 ID : 75189714719

Option 2 ID : 75189714718

Option 3 ID : 75189714717

Option 4 ID : 75189714720

Status : Answered

Chosen Option : 1

Q.70 An object is placed in front of a concave mirror of focal length 6 cm, at a distance of 24 cm. The magnification produced by the mirror is _____.

- Ans
- 1. $-\frac{1}{3}$
 - 2. -3
 - 3. $\frac{1}{3}$
 - 4. 3

Question ID : 7518976607
Option 1 ID : 75189726426
Option 2 ID : 75189726428
Option 3 ID : 75189726425
Option 4 ID : 75189726427
Status : Answered
Chosen Option : 1

Q.71 Refer to the following number, symbol series and answer the question.

7 4 & @ 3 4 % @ \$ 4 @ 3 4 % 4 \$ 5 * @ 4 3 4 5 * 3

How many 4s are there that are immediately followed by a symbol?

- Ans
- 1. Nine
 - 2. Seven
 - 3. Five
 - 4. Three

Question ID : 7518978265
Option 1 ID : 75189733059
Option 2 ID : 75189733057
Option 3 ID : 75189733058
Option 4 ID : 75189733060
Status : Answered
Chosen Option : 3

Q.72 India is a member of the General Agreement on Tariffs and Trade (GATT) since _____.

- Ans
- 1. 1962
 - 2. 1948
 - 3. 1990
 - 4. 1985

Question ID : 7518974253
Option 1 ID : 75189717010
Option 2 ID : 75189717009
Option 3 ID : 75189717012
Option 4 ID : 75189717011
Status : Answered
Chosen Option : 4

Q.73 Five persons, P, Q, R, S and T travelled in different months of the same year viz. January, February, March, April and May.

Q travelled in February. Only one person travelled between Q and P. Only three people travelled between T and R. R travelled in a month after P. Who among them travelled in May?

- Ans**
- 1. S
 - 2. P
 - 3. T
 - 4. R

Question ID : 7518978191
Option 1 ID : 75189732762
Option 2 ID : 75189732761
Option 3 ID : 75189732763
Option 4 ID : 75189732764
Status : Answered
Chosen Option : 4

Q.74 The Constitution divided the powers between the Centre and the States in the terms of _____ lists.

- Ans**
- 1. 4
 - 2. 3
 - 3. 2
 - 4. 5

Question ID : 7518977560
Option 1 ID : 75189730239
Option 2 ID : 75189730238
Option 3 ID : 75189730237
Option 4 ID : 75189730240
Status : Answered
Chosen Option : 2

Q.75 Select the option that is related to the fifth letter-cluster in the same way as the second letter-cluster is related to the first letter-cluster and the fourth letter-cluster is related to the third letter-cluster.

LAPTOP : QPUQBM :: MOBILE : FMICPN :: DEVICE : ?

- Ans**
- 1. FDJWFE
 - 2. FDJFEW
 - 3. FDJFFW
 - 4. EFWJDF

Question ID : 7518977703
Option 1 ID : 75189730810
Option 2 ID : 75189730811
Option 3 ID : 75189730812
Option 4 ID : 75189730809
Status : Answered
Chosen Option : 1

Q.76 What kind of resources are the fossil fuels coal and petroleum?

- Ans
- 1. Inexhaustible
 - 2. Exhaustible and non-renewable
 - 3. Exhaustible and renewable
 - 4. Renewable

Question ID : 7518974691
Option 1 ID : 75189718763
Option 2 ID : 75189718762
Option 3 ID : 75189718761
Option 4 ID : 75189718764
Status : Answered
Chosen Option : 2

Q.77 Which of the following is a public sector bank in India?

- Ans
- 1. Tamilnad Mercantile Bank
 - 2. Indian Overseas Bank
 - 3. Bandhan Bank
 - 4. IndusInd Bank

Question ID : 7518977507
Option 1 ID : 75189730026
Option 2 ID : 75189730027
Option 3 ID : 75189730028
Option 4 ID : 75189730025
Status : Answered
Chosen Option : 2

Q.78 If

'-' means '+',

'+' means '×',

'÷' stands for '-' and

'×' means '+',

then which of the following equations is correct?

- Ans
- 1. $20 + 3 - 9 \div 5 \times 2 = 20$
 - 2. $20 - 3 + 9 \times 5 \div 2 = 63$
 - 3. $20 \times 3 \div 9 - 5 + 2 = 32$
 - 4. $20 \div 3 \times 9 + 5 - 2 = 50$

Question ID : 7518978080
Option 1 ID : 75189732317
Option 2 ID : 75189732318
Option 3 ID : 75189732319
Option 4 ID : 75189732320
Status : Not Answered
Chosen Option : --

Q.79 A certain number of people are sitting in a row, facing the north. R sits third to the left of P. Q sits fourth to the right of P. Only two persons sit between Q and T. If no other person is sitting in the row, what is the total number of persons seated?

- Ans**
- 1. 12
 - 2. 11
 - 3. 15
 - 4. 13

Question ID : 7518977311
 Option 1 ID : 75189729242
 Option 2 ID : 75189729243
 Option 3 ID : 75189729244
 Option 4 ID : 75189729241
 Status : Not Answered
 Chosen Option : --

Q.80 In this question, a group of letters is coded using letters/symbols as per the table given below, and the conditions that follow. The correct combination of codes following the conditions is your answer.

Letter/Symbols	O	E	R	L	A	V	&	\$	@
Code	7	6	1	4	8	2	3	5	9

- Condition 1: If a word starts with a vowel but ends with a consonant then codes for first and last letter to be reversed.
- Condition 2: If there are more than two vowels in a word, then first vowel is to be coded as 1, second vowel as 2 and so on.
- Condition 3: If a word starts with a consonant and also ends with a consonant then vowels are to be coded after coding all the consonants.

What is the code for "ALOEVERA"?

- Ans**
- 1. 84232615
 - 2. 14232415
 - 3. 14762618
 - 4. 84762618

Question ID : 7518979017
 Option 1 ID : 75189736065
 Option 2 ID : 75189736068
 Option 3 ID : 75189736066
 Option 4 ID : 75189736067
 Status : Not Answered
 Chosen Option : --

Q.81 $\frac{(1 + \cot\theta - \operatorname{cosec}\theta)(1 + \tan\theta + \sec\theta)(\sec^2\theta)}{(\sec\theta - \cos\theta)(\cot\theta + \tan\theta)}$, $0^\circ < \theta < 90^\circ$, is equal to:

- Ans**
- 1. $2 \sec \theta$
 - 2. $2 \operatorname{cosec} \theta$
 - 3. $\sin \theta$
 - 4. $\cos \theta$

Question ID : 7518978482
 Option 1 ID : 75189733927
 Option 2 ID : 75189733928
 Option 3 ID : 75189733926
 Option 4 ID : 75189733925
 Status : Not Answered
 Chosen Option : --

Q.82 When a number is divided by 15, the remainder is 9. What will be the remainder when the same number is divided by 5?

- Ans
- 1. 2
 - 2. 3
 - 3. 1
 - 4. 4

Question ID : 7518976030
Option 1 ID : 75189724119
Option 2 ID : 75189724120
Option 3 ID : 75189724117
Option 4 ID : 75189724118
Status : Answered
Chosen Option : 4

Q.83 Which disease in human beings is caused by UV radiation from the Sun?

- Ans
- 1. Smallpox
 - 2. Skin cancer
 - 3. Parkinson's disease
 - 4. Pneumonia

Question ID : 7518977860
Option 1 ID : 75189731438
Option 2 ID : 75189731437
Option 3 ID : 75189731439
Option 4 ID : 75189731440
Status : Answered
Chosen Option : 2

Q.84 The position of how many letters will remain unchanged if each of the letters in the word AMBUSHED is arranged in the reverse alphabetical order?

- Ans
- 1. Two
 - 2. zero
 - 3. Three
 - 4. One

Question ID : 7518977966
Option 1 ID : 75189731863
Option 2 ID : 75189731861
Option 3 ID : 75189731864
Option 4 ID : 75189731862
Status : Answered
Chosen Option : 2

Q.85 Which of the following festivals is celebrated in the month of January every year?

- Ans
- 1. Ugadi
 - 2. Onam
 - 3. Gudi Padwa
 - 4. Pongal

Question ID : 7518974177
Option 1 ID : 75189716706
Option 2 ID : 75189716708
Option 3 ID : 75189716707
Option 4 ID : 75189716705
Status : Answered
Chosen Option : 3

Q.86 Read the given statements and conclusions carefully and decide which of the given conclusions logically follow(s) from the statements.

Statements:

In a race,

1. G is behind L who is behind D.
2. D is ahead of G who is ahead of R.
3. F is not behind V who is ahead of R.

Conclusions:

- I. V is behind D.
- II. F is ahead of R.
- III. D is ahead of R.

- Ans
- 1. Conclusion III follows
 - 2. Conclusions II and III follow
 - 3. Conclusions I and III follow
 - 4. Conclusions I and II follow

Question ID : 7518977950
Option 1 ID : 75189731799
Option 2 ID : 75189731800
Option 3 ID : 75189731798
Option 4 ID : 75189731797
Status : Not Answered
Chosen Option : --

Q.87

In January 2022, who launched NIPER Research Portal?

Ans

- 1. Amit Shah
- 2. Narendra Modi
- 3. Mansukh Mandaviya
- 4. Piyush Goyal

Question ID : 7518973782
Option 1 ID : 75189715127
Option 2 ID : 75189715125
Option 3 ID : 75189715126
Option 4 ID : 75189715128
Status : Answered
Chosen Option : 1

Q.88 If the product of two numbers is 8410 and their HCF is 29, then their LCM is:

- Ans
- 1. 330
 - 2. 290
 - 3. 270
 - 4. 310

Question ID : 7518976255
Option 1 ID : 75189725020
Option 2 ID : 75189725018
Option 3 ID : 75189725019
Option 4 ID : 75189725017
Status : Answered
Chosen Option : 2

Q.89 T, U, V, W, X, Y, Z and A are sitting in a straight row, facing north. Only Z sits between T and V. A sits at the extreme left end of the row. Only three people sit between Z and Y. Only X sits between V and W. T sits to the immediate right of U. Who sits to the immediate right of A?

- Ans
- 1. U
 - 2. W
 - 3. Z
 - 4. T

Question ID : 7518977586
Option 1 ID : 75189730344
Option 2 ID : 75189730341
Option 3 ID : 75189730343
Option 4 ID : 75189730342
Status : Not Answered
Chosen Option : --

Q.90 Toothpaste is generally _____ in nature.

- Ans
- 1. acidic
 - 2. harmful
 - 3. neutral
 - 4. basic

Question ID : 7518973468
Option 1 ID : 75189713869
Option 2 ID : 75189713871
Option 3 ID : 75189713872
Option 4 ID : 75189713870
Status : Answered
Chosen Option : 4

Q.91 What did Mendel discover about the factors that influence heredity?

- Ans
- 1. A pair of factors in sexually reproducing organisms defines their characteristics.
 - 2. Self-fertilisation shows paternal traits only.
 - 3. Traits are expressed due to production of hormones.
 - 4. All offspring in one generation appear like only one of the parents.

Question ID : 7518974439
Option 1 ID : 75189717756
Option 2 ID : 75189717753
Option 3 ID : 75189717754
Option 4 ID : 75189717755
Status : Answered
Chosen Option : 4

Q.92 What is the median of the following data?

41, 32, 50, 28, 35, 19, 27, 31, 45, 16, 34, 37

- Ans
- 1. 33.5
 - 2. 33
 - 3. 34
 - 4. 32.5

Question ID : 7518978421
Option 1 ID : 75189733683
Option 2 ID : 75189733682
Option 3 ID : 75189733684
Option 4 ID : 75189733681
Status : Not Answered
Chosen Option : --

Q.93 Three statements are followed by three conclusions numbered I, II and III. Assuming the statements to be true, even if they do not conform to real world knowledge, decide which of the given conclusions/possibilities can be true on the basis of the statements.

Statements:

1. All sparrows are birds.
2. Some birds are animals.
3. All dogs are animals.

Conclusions:

- I. Some dogs are sparrows.
- II. All animals are birds is a possibility.
- III. Some animals are sparrows.

- Ans**
- 1. Only conclusion I and II are true
 - 2. Only conclusion II is true
 - 3. Only conclusion III is true
 - 4. Only conclusion I is true

Question ID : 7518978202
 Option 1 ID : 75189732808
 Option 2 ID : 75189732806
 Option 3 ID : 75189732807
 Option 4 ID : 75189732805
 Status : Answered
 Chosen Option : 3

Q.94 Vamsi's father is 60 years old. He is 20 years older than twice Vamsi's age. Find Vamsi's age.

- Ans**
- 1. 20 years
 - 2. 30 years
 - 3. 25 years
 - 4. 15 years

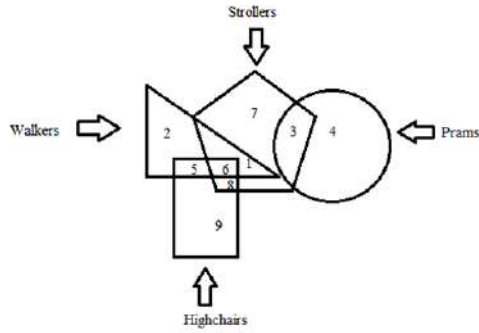
Question ID : 7518976150
 Option 1 ID : 75189724597
 Option 2 ID : 75189724600
 Option 3 ID : 75189724598
 Option 4 ID : 75189724599
 Status : Answered
 Chosen Option : 1

Q.95 If $4^x - 4^{x-1} = 24$, then the value of $\frac{2x-1}{2x+3}$ is:

- Ans**
- 1. $\frac{1}{5}$
 - 2. $\frac{3}{7}$
 - 3. $\frac{1}{2}$
 - 4. $\frac{1}{3}$

Question ID : 7518978348
 Option 1 ID : 75189733391
 Option 2 ID : 75189733392
 Option 3 ID : 75189733390
 Option 4 ID : 75189733389
 Status : Answered
 Chosen Option : 2

Q.96 Study the given diagram carefully and answer the question. The numbers in different sections indicate the number of things.



How many such walkers are there that are also highchairs but NEITHER prams NOR strollers?

- Ans
- 1. 8
 - 2. 5
 - 3. 6
 - 4. 9

Question ID : 7518977319
 Option 1 ID : 75189729276
 Option 2 ID : 75189729273
 Option 3 ID : 75189729274
 Option 4 ID : 75189729275
 Status : Answered
 Chosen Option : 2

Q.97 Which city of India will host the 2023 International Olympic Committee Session?

- Ans
- 1. Guwahati
 - 2. Shimla
 - 3. Mumbai
 - 4. Chennai

Question ID : 7518976473
 Option 1 ID : 75189725892
 Option 2 ID : 75189725890
 Option 3 ID : 75189725891
 Option 4 ID : 75189725889
 Status : Answered
 Chosen Option : 1

Q.98 An object, 2.0 cm in height, is placed at a distance of 6.0 cm in front of a concave mirror of focal length 8.0 cm, on its principal axis. Its image has a height of _____ and is _____.

- Ans
- 1. more than 2.0 cm, inverted
 - 2. more than 2.0 cm, erect
 - 3. less than 2.0 cm, erect
 - 4. less than 2.0 cm, inverted

Question ID : 7518976586
 Option 1 ID : 75189726344
 Option 2 ID : 75189726342
 Option 3 ID : 75189726341
 Option 4 ID : 75189726343
 Status : Answered
 Chosen Option : 2

Q.99 Study the given table and answer the question that follows.

The table presents the total expenditure made by a company under different heads during the years 2016 to 2022.

Year	Expenditure				
	Raw Material	Transport	Salary	Establishments	Tax
2022	789	123	122	987	97
2021	786	112	132	789	98
2020	798	109	169	678	112
2019	879	101	196	897	134
2018	987	98	199	876	141
2017	890	95	173	766	108
2016	908	78	166	567	111

The total expenditure of the company in 2020 was approximately what per cent of the total expenditure in 2022?

- Ans
- 1. 93%
 - 2. 82%
 - 3. 89%
 - 4. 95%

Question ID : 7518978099

Option 1 ID : 75189732394

Option 2 ID : 75189732393

Option 3 ID : 75189732395

Option 4 ID : 75189732396

Status : Not Answered

Chosen Option : --

Q.100 Six children, F, G, H, I, J and K, were examined for intelligence and were given marks according to their performance in the test. Each child scored different marks. H scored more than J. H scored less than G and K. J scored less than I. F scored more than G. Who among the six children scored the least?

- Ans
- 1. H
 - 2. J
 - 3. K
 - 4. I

Question ID : 7518974967

Option 1 ID : 75189719866

Option 2 ID : 75189719868

Option 3 ID : 75189719865

Option 4 ID : 75189719867

Status : Answered

Chosen Option : 2