



रेल भर्ती बोर्ड / RAILWAY RECRUITMENT BOARDS
सी ई एन आर आर सी - ०१/२०१९ - CEN RRC - 01/2019



Roll Number	
Candidate Name	
Test Center Name	Dr.Y.S.R. ANU COLLEGE OF ENGINEERING & TECHNOLOGY
Test Date	17/08/2022
Test Time	5:00 PM - 6:30 PM
Subject	Level 1

* Note

Correct Answer will carry 1 mark per Question.
Incorrect Answer will carry 1/3 Negative mark per Question.

- Options shown in green color with a tick icon are correct.
- Chosen option on the right of the question indicates the option selected by the candidate.

Section : Level 1

Q.1 In the given letter-cluster pairs, the first letter-cluster is related to the second letter-cluster following a certain logic.
Study the given pairs carefully, and from the given options, select the pair that follows the same logic.

TORPEDO : DEOOPRT

FLICKER : CEFIKLR

- Ans
- 1. CYNICAL : ACCLINY
 - 2. CURTAIN : RUCNIAT
 - 3. PERTAIN : AEINPRT
 - 4. CLOSURE : OLCERUS

Question ID : 7518975278

Option 1 ID : 75189721112

Option 2 ID : 75189721111

Option 3 ID : 75189721110

Option 4 ID : 75189721109

Status : Answered

Chosen Option : 3

Q.2 Four friends Ramniwas, Ramesh, Ramsingh and Raman received their PhD degrees in consecutive months of the same calendar year. Ramniwas received his degree exactly one month prior to Ramsingh. Raman received his degree exactly one month after Ramesh. Ramniwas received his degree in September and Raman did not obtain his degree before Ramniwas. In which month did Ramesh receive his degree?

- Ans**
- 1. August
 - 2. October
 - 3. November
 - 4. December

Question ID : **7518974730**
Option 1 ID : **75189718920**
Option 2 ID : **75189718917**
Option 3 ID : **75189718918**
Option 4 ID : **75189718919**
Status : **Answered**
Chosen Option : **3**

Q.3 A statement is given followed by two assumptions numbered I and II. You have to assume everything in the statement to be true and decide which of the given assumptions is/are implicit in the statement.

Statement:

The demand for smartphones and laptops has increased substantially since the introduction of online classes in schools.

Assumptions:

- I. People are buying smartphones and laptops to enable their children to attend online classes
- II. Desktop computers cannot be used to attend online classes.

- Ans**
- 1. Only assumption II is implicit
 - 2. Only assumption I is implicit
 - 3. Neither assumption I nor II is implicit
 - 4. Both assumptions I and II are implicit

Question ID : **7518976408**
Option 1 ID : **75189725630**
Option 2 ID : **75189725629**
Option 3 ID : **75189725631**
Option 4 ID : **75189725632**
Status : **Answered**
Chosen Option : **2**

Q.4 From point X, a girl walks 70 m towards the north. Then, she takes a left turn and walks 150 m. Then, she takes a left turn and walks 70 m. Then, she takes another left turn and walks 90 m. She then takes a right turn and walks 100 m. Finally, she takes a left turn and walks 60 m to reach point Z. How far and in which direction is point Z from point X?
(All turns are 90 degree turns only)

- Ans**
- 1. 60 m, South
 - 2. 60 m, North
 - 3. 100 m, North
 - 4. 100 m, South

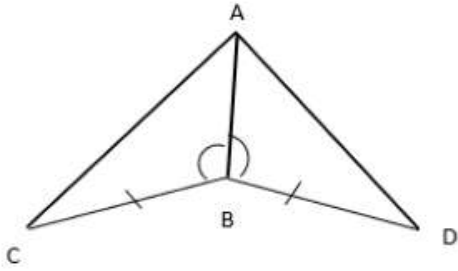
Question ID : **7518975043**
Option 1 ID : **75189720170**
Option 2 ID : **75189720169**
Option 3 ID : **75189720171**
Option 4 ID : **75189720172**
Status : **Answered**
Chosen Option : **4**

Q.5 The HCF of two numbers is 7 and their LCM is 434. If one of the numbers is 14, find the other.

- Ans**
- 1. 146
 - 2. 217
 - 3. 52
 - 4. 48

Question ID : **7518976044**
Option 1 ID : **75189724176**
Option 2 ID : **75189724175**
Option 3 ID : **75189724174**
Option 4 ID : **75189724173**
Status : **Answered**
Chosen Option : **2**

Q.6 In the given figure $\angle ABC = \angle ABD, BC = BD$ then $\triangle CAB \cong \triangle$ -----



- Ans
- 1. DBA
 - 2. DAB
 - 3. ADB
 - 4. ABD

Question ID : 7518975770
 Option 1 ID : 75189723078
 Option 2 ID : 75189723080
 Option 3 ID : 75189723079
 Option 4 ID : 75189723077
 Status : Answered
 Chosen Option : 2

Q.7 Study the given letter, symbol series and answer the question that follows.

L @ S * E ^ B U # W I < E M @ O S # B * H ! A & L < O

If we replace each of the vowels with any consonant and similarly if we replace each of the consonants in the original series with any vowel, then how many consonants will be immediately followed by a symbol in the resultant series thus formed?

- Ans
- 1. 5
 - 2. 7
 - 3. 6
 - 4. 4



Question ID : 7518974809
 Option 1 ID : 75189719234
 Option 2 ID : 75189719236
 Option 3 ID : 75189719235
 Option 4 ID : 75189719233
 Status : Answered
 Chosen Option : 1

Q.8 In which organism sex is not determined genetically?

- Ans
- 1. Sparrow
 - 2. Butterfly
 - 3. Snail
 - 4. Moth

Question ID : 7518974450
Option 1 ID : 75189717799
Option 2 ID : 75189717798
Option 3 ID : 75189717797
Option 4 ID : 75189717800
Status : Answered
Chosen Option : 4

Q.9 The age of a father six years ago was six times the then age of his daughter. Three years hence, the father will be thrice as old as his daughter. What is the present age of the daughter?

- Ans
- 1. 15 years
 - 2. 12 years
 - 3. 17 years
 - 4. 20 years

Question ID : 7518976343
Option 1 ID : 75189725370
Option 2 ID : 75189725369
Option 3 ID : 75189725371
Option 4 ID : 75189725372
Status : Answered
Chosen Option : 2

Q.10 Two wires A and B are made of same material and have the same length but different cross-sectional areas. If the resistance of wire A is 16 times the resistance of wire B, the ratio of the cross-sectional area of wire A to that of wire B is:

- Ans
- 1. 1 : 4
 - 2. 1 : 16
 - 3. 4 : 1
 - 4. 16 : 1

Question ID : 7518975465
Option 1 ID : 75189721857
Option 2 ID : 75189721859
Option 3 ID : 75189721858
Option 4 ID : 75189721860
Status : Answered
Chosen Option : 2

Q.11 Each of W, X, Y, Z, A, B and C has a wedding to attend on a different day of a week starting from Monday to Sunday of the same week. C has to attend wedding immediately after A. Y has to attend a wedding on one of the days before B and W. Only Z has to attend a wedding before A. X has to attend a wedding on Friday. B does not have to attend a wedding on Sunday. On which day of the week does Y have to attend a wedding?

- Ans**
- 1. Saturday
 - 2. Sunday
 - 3. Wednesday
 - 4. Thursday

Question ID : 7518974911
Option 1 ID : 75189719642
Option 2 ID : 75189719644
Option 3 ID : 75189719643
Option 4 ID : 75189719641
Status : Answered
Chosen Option : 4

Q.12 Who was conferred with Major Dhyan Chand Khel Ratna Award 2021 for his outstanding achievements in Para shooting?

- Ans**
- 1. Harman Preet Singh
 - 2. Praveen Kumar
 - 3. Manish Narwal
 - 4. Sharad Kumar

Question ID : 7518973944
Option 1 ID : 75189715774
Option 2 ID : 75189715775
Option 3 ID : 75189715773
Option 4 ID : 75189715776
Status : Answered
Chosen Option : 1

Q.13 Which of the following alphanumeric clusters will replace the question mark (?) in the series to make it logically complete?

1 AZC 2, 3 D YF 4, 7 GXI 8, ?

- Ans**
- 1. 15 JWL 16
 - 2. 13 IJK 14
 - 3. 13 IWK 14
 - 4. 15 IVK 16

Question ID : 7518974782
Option 1 ID : 75189719128
Option 2 ID : 75189719127
Option 3 ID : 75189719126
Option 4 ID : 75189719125
Status : Answered
Chosen Option : 1

Q.14 A cost incurred in the past and that cannot be recovered in the future is called _____.

- Ans
- 1. economic cost
 - 2. floating cost
 - 3. sunk cost
 - 4. prime cost

Question ID : 7518974231
Option 1 ID : 75189716924
Option 2 ID : 75189716922
Option 3 ID : 75189716921
Option 4 ID : 75189716923
Status : Answered
Chosen Option : 1

Q.15 If $2^x \times 4^{12} \times 8^3 = 16^{11}$, then the value of x is:

- Ans
- 1. 14
 - 2. 12
 - 3. 11
 - 4. 13

Question ID : 7518976222
Option 1 ID : 75189724888
Option 2 ID : 75189724885
Option 3 ID : 75189724886
Option 4 ID : 75189724887
Status : Answered
Chosen Option : 4

Q.16 Identify the personality from among the following who received the Padma Shri 2022 award in the sports field.

- Ans
- 1. Tara Jauhar
 - 2. Shaibal Gupta
 - 3. Shivnath Mishra
 - 4. Avani Lekhara

Question ID : 7518976474
Option 1 ID : 75189725894
Option 2 ID : 75189725896
Option 3 ID : 75189725895
Option 4 ID : 75189725893
Status : Not Attempted and
Marked For Review
Chosen Option : --

Q.17 A can finish painting a sari in 11 days, B in 20 days and C in 55 days, if they work independently. In how many days can the work be completed if A is assisted by B on every odd numbered day and by C on every even numbered day till the work completes?

- Ans**
- 1. 8 days
 - 2. 18 days
 - 3. 12 days
 - 4. 9 days

Question ID : 7518975659
Option 1 ID : 75189722634
Option 2 ID : 75189722636
Option 3 ID : 75189722633
Option 4 ID : 75189722635
Status : Answered
Chosen Option : 1

Q.18 Eight friends, A, B, C, D, E, F, G and H are sitting around a square table facing the centre of the table. Four of them are sitting at the corners while the other four are sitting at the exact centre of sides of the table. Both A and C are sitting at the opposite corners. F and D are sitting at the opposite corners. Only G is between A and F. Only B is between A and D. H is to the immediate left of C. G is to the immediate right of F. E is second to right of H. D is second to left of C. D is third to left of E. Who is sitting second to left of B?

- Ans**
- 1. E
 - 2. F
 - 3. G
 - 4. H

Question ID : 7518975135
Option 1 ID : 75189720537
Option 2 ID : 75189720538
Option 3 ID : 75189720539
Option 4 ID : 75189720540
Status : Answered
Chosen Option : 3

Q.19 P, Q, R, S and T are sitting in a straight line, facing north. S is an immediate neighbour of both P and R. R is an immediate neighbour of both S and Q. Q is an immediate neighbour of both R and T. Who are the immediate neighbours of Q?

- Ans**
- 1. S and R
 - 2. S and T
 - 3. P and R
 - 4. R and T

Question ID : 7518974716
Option 1 ID : 75189718861
Option 2 ID : 75189718863
Option 3 ID : 75189718864
Option 4 ID : 75189718862
Status : Answered
Chosen Option : 4

Q.20 What does the term 'Upa' in the term Upanishad denote?

- Ans
- 1. Nearness
 - 2. Totality
 - 3. Secret
 - 4. Happiness

Question ID : 7518973844
Option 1 ID : 75189715376
Option 2 ID : 75189715375
Option 3 ID : 75189715374
Option 4 ID : 75189715373
Status : Answered
Chosen Option : 1

Q.21 'Save the Narmada' movement originated as a protest against raising the height of Sardar Sarovar Dam. Some disadvantages of building dams are mentioned below. Which one is an advantage?

- Ans
- 1. Helpful in irrigation and electricity production
 - 2. Lot of public money is used
 - 3. Many tribals and peasants are displaced
 - 4. Causes deforestation and loss of biodiversity

Question ID : 7518974700
Option 1 ID : 75189718800
Option 2 ID : 75189718798
Option 3 ID : 75189718797
Option 4 ID : 75189718799
Status : Answered
Chosen Option : 1

Q.22 Arrange the following metals in the decreasing order of reactivity:

K, Na, Zn, Cu, Hg, Ag

- Ans
- 1. $K > Na > Zn > Ag > Hg > Cu$
 - 2. $K > Na > Zn > Cu > Ag > Hg$
 - 3. $K > Na > Zn > Cu > Hg > Ag$
 - 4. $K > Na > Zn > Hg > Cu > Ag$

Question ID : 7518973683
Option 1 ID : 75189714732
Option 2 ID : 75189714730
Option 3 ID : 75189714729
Option 4 ID : 75189714731
Status : Answered
Chosen Option : 3

Q.23 A man invested ₹75,000 at the rate of $7\frac{1}{2}\%$ per annum simple interest for 6 years. Find the amount he will receive after 6 years.

- Ans**
- 1. ₹69,600
 - 2. ₹75,000
 - 3. ₹1,12,500
 - 4. ₹1,08,750

Question ID : 7518976066
Option 1 ID : 75189724261
Option 2 ID : 75189724263
Option 3 ID : 75189724264
Option 4 ID : 75189724262
Status : Answered
Chosen Option : 4

Q.24 What is the direction of the Inter Tropical Convergence Zone in winter?

- Ans**
- 1. Westward
 - 2. Southward
 - 3. Northward
 - 4. Eastward

Question ID : 7518973894
Option 1 ID : 75189715576
Option 2 ID : 75189715573
Option 3 ID : 75189715574
Option 4 ID : 75189715575
Status : Marked For Review
Chosen Option : 4

Q.25 A student focusses a sharp image of sun using a spherical mirror on a sheet of paper, which starts to burn after some time.
Which of the following statement/statements about the mirror is/are correct?

- (a) It is concave spherical mirror
- (b) It has positive focal length
- (c) It is a converging mirror

Ans 1. Both (a) and (c)
 2. Both (a) and (b)
 3. (a), (b) and (c)
 4. Both (b) and (c)

Question ID : 7518975379
Option 1 ID : 75189721515
Option 2 ID : 75189721513
Option 3 ID : 75189721516
Option 4 ID : 75189721514
Status : Answered
Chosen Option : 2

Q.26 Which of the following statements is FALSE?

Ans 1. In the first stage of respiration, breakdown of glucose takes place.
 2. In the mitochondria, acetic acid is broken down utilising oxygen.
 3. Pyruvic acid is produced in the first stage of respiration.
 4. Oxygen is not necessary for the fermentation process.

Question ID : 7518974337
Option 1 ID : 75189717347
Option 2 ID : 75189717345
Option 3 ID : 75189717348
Option 4 ID : 75189717346
Status : Answered
Chosen Option : 4

Q.27 The sum of the roots of the quadratic equation $4x^2 + 7x - 21 = 0$ is:

- Ans
- 1. $-\frac{21}{4}$
 - 2. -21
 - 3. $-\frac{7}{4}$
 - 4. $\frac{7}{4}$

Question ID : 7518976169
Option 1 ID : 75189724674
Option 2 ID : 75189724673
Option 3 ID : 75189724675
Option 4 ID : 75189724676
Status : Answered
Chosen Option : 1

Q.28 What is the area of an equilateral triangle whose each side is 14 cm long?

- Ans
- 1. $21\sqrt{3} \text{ cm}^2$
 - 2. $14\sqrt{3} \text{ cm}^2$
 - 3. $35\sqrt{3} \text{ cm}^2$
 - 4. $49\sqrt{3} \text{ cm}^2$

Question ID : 7518976358
Option 1 ID : 75189725432
Option 2 ID : 75189725429
Option 3 ID : 75189725430
Option 4 ID : 75189725431
Status : Answered
Chosen Option : 4

Q.29 If 2 is subtracted from each odd digit and 1 is added to each even digit in the number 83252769, how many digits will occur more than once in the new number thus formed?

- Ans
- 1. None
 - 2. Three
 - 3. Two
 - 4. One

Question ID : 7518974879
Option 1 ID : 75189719513
Option 2 ID : 75189719516
Option 3 ID : 75189719515
Option 4 ID : 75189719514
Status : Answered
Chosen Option : 3

Q.30 Which of the following is the commercial unit of electric energy?

- Ans
- 1. Calorie
 - 2. Kilowatt hour
 - 3. Joule
 - 4. Watt second

Question ID : 7518975491
Option 1 ID : 75189721963
Option 2 ID : 75189721962
Option 3 ID : 75189721961
Option 4 ID : 75189721964
Status : Answered
Chosen Option : 4

Q.31 A man travelled at a speed of 20 m/min for 100 min, and at a speed of 70 m/min for 50 min. His average speed is

- Ans
- 1. 25 m/min
 - 2. 35 m/min
 - 3. $\frac{110}{3}$ m/min
 - 4. $\frac{70}{3}$ m/min

Question ID : 7518975673
Option 1 ID : 75189722692
Option 2 ID : 75189722691
Option 3 ID : 75189722689
Option 4 ID : 75189722690
Status : Answered
Chosen Option : 3

Q.32 Panchayati Raj Institutions in India have been established following the _____ of the Constitution Of India.

- Ans
- 1. 42nd Amendment Act
 - 2. 57th Amendment Act
 - 3. 73rd Amendment Act
 - 4. 86th Amendment Act

Question ID : 7518974305
Option 1 ID : 75189717217
Option 2 ID : 75189717218
Option 3 ID : 75189717219
Option 4 ID : 75189717220
Status : Answered
Chosen Option : 3

Q.33 Sohan Singh Bhakna was the first president of the _____ founded by Indians in the United States of America in 1913.

- Ans
- 1. Swatantra Party
 - 2. Ghadar Party
 - 3. Swaraj Party
 - 4. India Revolutionary party

Question ID : 7518974170

Option 1 ID : 75189716679

Option 2 ID : 75189716678

Option 3 ID : 75189716677

Option 4 ID : 75189716680

Status : **Not Attempted and Marked For Review**

Chosen Option : --

Q.34 If θ is an acute angle, find the denominator A, when

$$(\operatorname{cosec} \theta - \cot \theta)^2 = \frac{1 - \cos \theta}{A}$$

- Ans
- 1. $1 + \sin \theta$
 - 2. $\operatorname{cosec} \theta - 1$
 - 3. $1 + \cos \theta$
 - 4. $\cot \theta$

Question ID : 7518975782

Option 1 ID : 75189723126

Option 2 ID : 75189723128

Option 3 ID : 75189723125

Option 4 ID : 75189723127

Status : **Answered**

Chosen Option : 3

Q.35 Aruna has a younger sister whose age is 8 years less than that of Aruna. If Aruna's sister's age is 18 years, then Aruna's age is:

- Ans
- 1. 28 years
 - 2. 26 years
 - 3. 10 years
 - 4. 24 years

Question ID : 7518975930

Option 1 ID : 75189723717

Option 2 ID : 75189723719

Option 3 ID : 75189723720

Option 4 ID : 75189723718

Status : **Answered**

Chosen Option : 2

Q.36 Gayatri starts walking from her home and goes 100 m towards the south direction. She then turns right and walks 120 m. She then turns right and walks 100 m. She finally turns right again and walks 180 m. How far is she now from the starting point? (All turns are 90 degree turns only)

- Ans**
- 1. 100 m
 - 2. 50 m
 - 3. 90 m
 - 4. 60 m

Question ID : 7518975260
Option 1 ID : 75189721037
Option 2 ID : 75189721038
Option 3 ID : 75189721040
Option 4 ID : 75189721039
Status : Answered
Chosen Option : 4

Q.37 A cuboid of dimensions $18.5 \text{ cm} \times 12.5 \text{ cm} \times 10 \text{ cm}$ needs to be painted all over. Find the area to be painted.

- Ans**
- 1. 1198 cm^2
 - 2. 1157.5 cm^2
 - 3. 984.56 cm^2
 - 4. 1082.5 cm^2

Question ID : 7518975761
Option 1 ID : 75189723044
Option 2 ID : 75189723041
Option 3 ID : 75189723042
Option 4 ID : 75189723043
Status : Answered
Chosen Option : 3

Q.38 How many participants from India won the gold medal in the 14th International Olympiad on Astronomy and Astrophysics (IOAA) 2021?

- Ans**
- 1. 5
 - 2. 3
 - 3. 4
 - 4. 6

Question ID : 7518973956
Option 1 ID : 75189715823
Option 2 ID : 75189715821
Option 3 ID : 75189715822
Option 4 ID : 75189715824
Status : Answered
Chosen Option : 3

Q.39 Venkat brought a second-hand scooter and spent 10% of the cost on its repairs. He sold the scooter for a profit of ₹2,200. How much did he spend on repairs if he made a profit of 20%?

- Ans**
- 1. ₹1,200
 - 2. ₹750
 - 3. ₹1,000
 - 4. ₹400

Question ID : 7518976077
Option 1 ID : 75189724307
Option 2 ID : 75189724306
Option 3 ID : 75189724308
Option 4 ID : 75189724305
Status : Answered
Chosen Option : 4

Q.40 In Newlands Octaves, the properties of which two elements were found to be the same?

- Ans**
- 1. Li, Na
 - 2. Na, Mg
 - 3. H, Th
 - 4. Ca, Cl

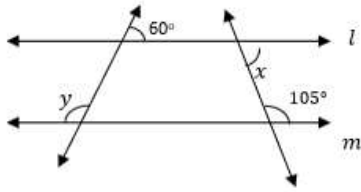
Question ID : 7518973705
Option 1 ID : 75189714817
Option 2 ID : 75189714819
Option 3 ID : 75189714818
Option 4 ID : 75189714820
Status : Answered
Chosen Option : 3

Q.41 Which day of the calendar year is acknowledged as the 'Rare Disease Day'?

- Ans**
- 1. 08 February
 - 2. 18 February
 - 3. 28 March
 - 4. 28 February

Question ID : 7518973777
Option 1 ID : 75189715105
Option 2 ID : 75189715106
Option 3 ID : 75189715108
Option 4 ID : 75189715107
Status : Answered
Chosen Option : 4

Q.42 In the adjoining figure line l is parallel to m . What is the value of $2x + y$?



- Ans
- 1. 320°
 - 2. 270°
 - 3. 150°
 - 4. 225°

Question ID : 7518976373

Option 1 ID : 75189725492

Option 2 ID : 75189725489

Option 3 ID : 75189725491

Option 4 ID : 75189725490

Status : Answered

Chosen Option : 2

Q.43 As of July 2022, under the Pradhan Mantri Shram Yogi Maan-Dhan Yojana (PM-SYM) (Old Age Protection), what percentage of monthly contribution is payable by the beneficiary?

- Ans
- 1. 50%
 - 2. 25%
 - 3. 40%
 - 4. 30%

Question ID : 7518976555

Option 1 ID : 75189726220

Option 2 ID : 75189726217

Option 3 ID : 75189726219

Option 4 ID : 75189726218

Status : Marked For Review

Chosen Option : 3

Q.44 Which of the following numbers will replace the question mark (?) in the given series?

3, 7, 13, 21, 31, ?

Ans 1. 44

2. 41

3. 42

4. 43

Question ID : 7518974858

Option 1 ID : 75189719432

Option 2 ID : 75189719429

Option 3 ID : 75189719430

Option 4 ID : 75189719431

Status : Answered

Chosen Option : 2

Q.45 What will come in place of the question mark (?) in the following equation, if '-' is interchanged with '×' and '+' is interchanged with '-'?

$$6 + 16 \times 4 + 9 - 8 + 2 \times 7 = ?$$

Ans 1. 47

2. -11

3. 43

4. 38

Question ID : 7518974885

Option 1 ID : 75189719539

Option 2 ID : 75189719540

Option 3 ID : 75189719537

Option 4 ID : 75189719538

Status : Answered

Chosen Option : 1

Q.46 The balanced reaction for following chemical reaction is:

Barium sulphate + Aluminium chloride → Barium chloride + Aluminium sulphate

Ans 1. $2 \text{BaSO}_4 + 2 \text{AlCl}_3 \rightarrow 2 \text{BaCl}_2 + \text{Al}_2(\text{SO}_4)_3$

2. $\text{BaSO}_4 + \text{AlCl}_3 \rightarrow \text{BaCl}_2 + \text{Al}_2(\text{SO}_4)_3$

3. $\text{BaSO}_4 + \text{AlCl}_2 \rightarrow \text{BaCl}_2 + \text{AlSO}_4$

4. $3 \text{BaSO}_4 + 2 \text{AlCl}_3 \rightarrow 3 \text{BaCl}_2 + \text{Al}_2(\text{SO}_4)_3$

Question ID : 7518973570

Option 1 ID : 75189714279

Option 2 ID : 75189714277

Option 3 ID : 75189714280

Option 4 ID : 75189714278

Status : Answered

Chosen Option : 2

Q.47 In a certain code language, PRECIOUS is written as KIVXRLFH and CLEAR is written as XOVZI. How will DIRTYING be written in the same language?

- Ans**
- 1. WHSGBRMT
 - 2. WRIFBRMS
 - 3. WRIGBRMT
 - 4. VRIGBROT

Question ID : 7518975246
Option 1 ID : 75189720984
Option 2 ID : 75189720982
Option 3 ID : 75189720981
Option 4 ID : 75189720983
Status : Answered
Chosen Option : 3

Q.48 The bluish colour of water in deep sea is due to:

- Ans**
- 1. reflection of light
 - 2. refraction of light
 - 3. scattering of light
 - 4. dispersion of light

Question ID : 7518975440
Option 1 ID : 75189721758
Option 2 ID : 75189721759
Option 3 ID : 75189721757
Option 4 ID : 75189721760
Status : Answered
Chosen Option : 2

Q.49 Which of the following features says that people of India have a direct role in electing their representatives?

- Ans**
- 1. Fundamental Rights
 - 2. Separation of Powers
 - 3. Secularism
 - 4. Parliamentary Form of Government

Question ID : 7518974093
Option 1 ID : 75189716372
Option 2 ID : 75189716370
Option 3 ID : 75189716371
Option 4 ID : 75189716369
Status : Answered
Chosen Option : 4

Q.50 Find the number of 2-digit numbers divisible by both 2 and 4.

- Ans
- 1. 12
 - 2. 42
 - 3. 22
 - 4. 32

Question ID : 7518975579
Option 1 ID : 75189722315
Option 2 ID : 75189722316
Option 3 ID : 75189722314
Option 4 ID : 75189722313
Status : Answered
Chosen Option : 1

Q.51 In which year was Steel Authority of India incorporated?

- Ans
- 1. 1973
 - 2. 1982
 - 3. 1987
 - 4. 1979

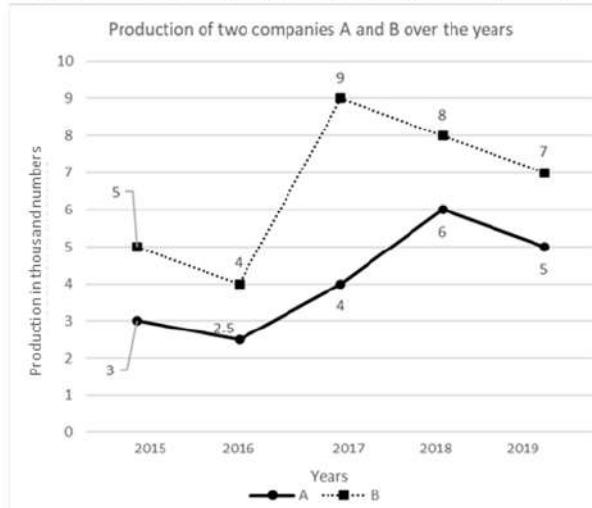
Question ID : 7518974065
Option 1 ID : 75189716257
Option 2 ID : 75189716259
Option 3 ID : 75189716260
Option 4 ID : 75189716258
Status : Not Answered
Chosen Option : --

Q.52 The present ages of Shanthi and Keerthi are in the ratio of 7 : 3. After 5 years, Shanthi's age will be 40. How old will Keerthi be after 5 years?

- Ans
- 1. 10 years
 - 2. 30 years
 - 3. 20 years
 - 4. 15 years

Question ID : 7518975932
Option 1 ID : 75189723726
Option 2 ID : 75189723728
Option 3 ID : 75189723727
Option 4 ID : 75189723725
Status : Answered
Chosen Option : 3

Q.53 Study the following graph carefully and answer the question.



For company A, what is the approximate percentage decrease in production from 2015 to 2016?

- Ans**
- 1. 15%
 - 2. 22%
 - 3. 25%
 - 4. 20%

Question ID : 7518975117
 Option 1 ID : 75189720467
 Option 2 ID : 75189720468
 Option 3 ID : 75189720465
 Option 4 ID : 75189720466
 Status : Answered
 Chosen Option : 1

Q.54 Study the given letter, symbol series and answer the question that follows.

L @ S * J ^ B U # W R < E @ N S # B * H ! A & L < W Q

How many symbols are immediately followed by a consonant and immediately preceded by a vowel?

- Ans**
- 1. 4
 - 2. 2
 - 3. 3
 - 4. 1

Question ID : 7518974807
 Option 1 ID : 75189719228
 Option 2 ID : 75189719226
 Option 3 ID : 75189719227
 Option 4 ID : 75189719225
 Status : Answered
 Chosen Option : 3

Q.55 The 'Mango Showers' phenomena in India is related to which season?

- Ans
- 1. Summer
 - 2. Rainy
 - 3. Winter
 - 4. Autumn

Question ID : 7518976490
Option 1 ID : 75189725958
Option 2 ID : 75189725960
Option 3 ID : 75189725959
Option 4 ID : 75189725957
Status : Answered
Chosen Option : 1

Q.56 Gosikhurd National Irrigation Project is related to which of the following states?

- Ans
- 1. Uttar Pradesh
 - 2. West Bengal
 - 3. Maharashtra
 - 4. Punjab

Question ID : 7518973898
Option 1 ID : 75189715590
Option 2 ID : 75189715589
Option 3 ID : 75189715591
Option 4 ID : 75189715592
Status : Answered
Chosen Option : 4

Q.57 What is the need to balance chemical equations?

Ans 1.

To indicate the ratio of volumes of reactants and products in which these react.

2. To satisfy the law of conservation of mass.

3. To satisfy the law of constant proportions.

4.

To indicate the ratio of masses of reactants and products in which these react.

Question ID : 7518973414

Option 1 ID : 75189713655

Option 2 ID : 75189713656

Option 3 ID : 75189713654

Option 4 ID : 75189713653

Status : Answered

Chosen Option : 1

Q.58 A white precipitate will be formed if we add ammonia solution to:

Ans 1. $\text{Mg}(\text{NO}_3)_2$ solution

2. $\text{Ba}(\text{NO}_3)_2$ solution

3. AlCl_3 solution

4. KNO_3 solution

Question ID : 7518973599

Option 1 ID : 75189714396

Option 2 ID : 75189714393

Option 3 ID : 75189714394

Option 4 ID : 75189714395

Status : Not Answered

Chosen Option : --

Q.59 Which of the following substances are selectively reabsorbed from the initial filtrate by the tubular portion of the nephron in human kidney?

Ans 1. Glucose, water, amino acids and proteins

2. Salts, glucose, fats and water

3. Glucose, water, salts and amino acids

4. Water, glucose, salts and proteins

Question ID : 7518974608

Option 1 ID : 75189718429

Option 2 ID : 75189718431

Option 3 ID : 75189718430

Option 4 ID : 75189718432

Status : Answered

Chosen Option : 3

Q.60 In this question, a statement is followed by two conclusions. Which of the two conclusions is/are true with respect to the statement?

Statement: $T > G < E > F = B \leq Z$

Conclusions:

I. $F = Z$

II. $E > B$

- Ans**
- 1. Both conclusions I and II are true
 - 2. Neither conclusion I nor II is true
 - 3. Only conclusion II is true
 - 4. Only conclusion I is true

Question ID : 7518974956
Option 1 ID : 75189719823
Option 2 ID : 75189719824
Option 3 ID : 75189719822
Option 4 ID : 75189719821
Status : Answered
Chosen Option : 3

Q.61 In a certain code language, TRY is written as 63 and NOT is written as 49. How will DUG be written in the same language?

- Ans**
- 1. 30
 - 2. 40
 - 3. 36
 - 4. 32

Question ID : 7518975244
Option 1 ID : 75189720973
Option 2 ID : 75189720976
Option 3 ID : 75189720975
Option 4 ID : 75189720974
Status : Answered
Chosen Option : 4

Q.62 On which day is a major national festival celebrated every year to commemorate the enactment of the Constitution of India, which declared India to be a sovereign, democratic and republic state?

- Ans**
- 1. 26th January
 - 2. 15th August
 - 3. 23rd March
 - 4. 2nd October

Question ID : 7518973999
Option 1 ID : 75189715993
Option 2 ID : 75189715995
Option 3 ID : 75189715994
Option 4 ID : 75189715996
Status : Answered
Chosen Option : 1

Q.63 Which of the following is not the use of bleaching powder?

- (i) to make drinking water free from germs
- (ii) in soda-acid fire extinguishers
- (iii) as an oxidising agent in many chemical industries
- (iv) for baking cakes

Ans 1. ii
 2. iii
 3. iv
 4. i

Question ID : 7518973648
Option 1 ID : 75189714592
Option 2 ID : 75189714590
Option 3 ID : 75189714591
Option 4 ID : 75189714589

Status : Answered

Chosen Option : 3

Q.64 Soil degradation is one of the major environmental problems being faced these days. A wide range of techniques to conserve soil are mentioned below. Select the INCORRECT option.

Ans 1. Crop rotation
 2. Planting trees
 3. Terrace farming
 4. Overgrazing

Question ID : 7518974663
Option 1 ID : 75189718649
Option 2 ID : 75189718651
Option 3 ID : 75189718652
Option 4 ID : 75189718650

Status : Answered

Chosen Option : 4

Q.65 If the sum of the roots of the quadratic equation $5x^2 + bx + 4 = 0$ is 9, then find the value of b.

- Ans
- 1. -25
 - 2. -45
 - 3. 0
 - 4. 20

Question ID : 7518976174
Option 1 ID : 75189724694
Option 2 ID : 75189724695
Option 3 ID : 75189724696
Option 4 ID : 75189724693
Status : Answered
Chosen Option : 4

Q.66 A contraceptive technique that increases phagocytosis of sperms within the uterus is:

- Ans
- 1. use of oral contraceptives
 - 2. use of condoms
 - 3. surgery
 - 4. use of copper T

Question ID : 7518974419
Option 1 ID : 75189717675
Option 2 ID : 75189717673
Option 3 ID : 75189717676
Option 4 ID : 75189717674
Status : Answered
Chosen Option : 1

Q.67 The resistivity of a material is dependent on which of the following factors?

- Ans
- 1. Temperature
 - 2. Length
 - 3. Resistance
 - 4. Area of cross section

Question ID : 7518975462
Option 1 ID : 75189721845
Option 2 ID : 75189721846
Option 3 ID : 75189721848
Option 4 ID : 75189721847
Status : Answered
Chosen Option : 4

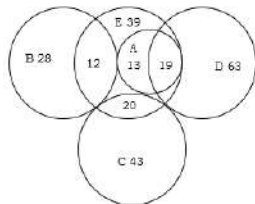
Q.68 A convex mirror used as a rear-view mirror of a car has a focal length of 2 m. If a bus is located at a distance of 3 m from the mirror, where will its image be formed?

- Ans**
- ✓ 1. 1.2 m behind the mirror
 - ✗ 2. 0.83 m in front of the mirror
 - ✗ 3. 1.2 m in front of the mirror
 - ✗ 4. 0.83 m behind the mirror

Question ID : **7518975384**
 Option 1 ID : **75189721533**
 Option 2 ID : **75189721535**
 Option 3 ID : **75189721534**
 Option 4 ID : **75189721536**
 Status : **Not Answered**
 Chosen Option : --

Q.69 Study the diagram and answer the question that follows. A = Academicians, E = Teachers, D = Women, B = Men and C = Doctors. The numbers inside the shapes indicate number of the respective persons. What is the sum total number of the following:

- i) women academicians who are teachers
- ii) teachers who are doctors and
- iii) men who are NEITHER teachers NOR academicians?



- Ans**
- ✗ 1. 64
 - ✗ 2. 41
 - ✗ 3. 63
 - ✓ 4. 67

Question ID : **7518974759**
 Option 1 ID : **75189719035**
 Option 2 ID : **75189719034**
 Option 3 ID : **75189719036**
 Option 4 ID : **75189719033**
 Status : **Answered**
 Chosen Option : 4

Q.70 Guard cells are involved in the process of _____.

- Ans
- 1. transport of food
 - 2. tropic movements
 - 3. circulation
 - 4. transpiration

Question ID : 7518974344
Option 1 ID : 75189717376
Option 2 ID : 75189717375
Option 3 ID : 75189717373
Option 4 ID : 75189717374
Status : Answered
Chosen Option : 2

Q.71 Which of the following rules is used to determine the direction of induced current due to the motion of coil at right angle to the magnetic field?

- Ans
- 1. Fleming's right-hand rule
 - 2. Maxwell's corkscrew rule
 - 3. Right-hand thumb rule
 - 4. Fleming's left-hand rule

Question ID : 7518975545
Option 1 ID : 75189722178
Option 2 ID : 75189722180
Option 3 ID : 75189722179
Option 4 ID : 75189722177
Status : Not Answered
Chosen Option : --

Q.72 A man travels 80 km in three hours. He further travels for two more hours. Find the distance travelled in the latter two hours, if his average speed for the entire journey is 30 km/h.

- Ans
- 1. 70 km
 - 2. 150 km
 - 3. 120 km
 - 4. 90 km

Question ID : 7518976112
Option 1 ID : 75189724448
Option 2 ID : 75189724445
Option 3 ID : 75189724446
Option 4 ID : 75189724447
Status : Answered
Chosen Option : 1

Q.73 Select the option that is related to the fifth number in the same way as the second number is related to the first number and the fourth number is related to the third number.

8 : 14 :: 12 : 22 :: 21 : ?

- Ans**
- 1. 40
 - 2. 18
 - 3. 42
 - 4. 26

Question ID : 7518974861
Option 1 ID : 75189719441
Option 2 ID : 75189719444
Option 3 ID : 75189719443
Option 4 ID : 75189719442
Status : Answered
Chosen Option : 1

Q.74 In March 2022, which bank did RBI direct to stop onboarding new customers?

- Ans**
- 1. AU Small Finance Bank
 - 2. Airtel Payment Bank
 - 3. Ujjivan Small Finance Bank
 - 4. Paytm Payments Bank

Question ID : 7518973851
Option 1 ID : 75189715403
Option 2 ID : 75189715401
Option 3 ID : 75189715404
Option 4 ID : 75189715402
Status : Answered
Chosen Option : 3

Q.75 A shopkeeper sold a book at a loss of 14%. If the selling price had been increased by ₹100, there would have been a gain of 6%. What was the cost price of the book?

- Ans**
- 1. ₹650
 - 2. ₹500
 - 3. ₹970
 - 4. ₹450

Question ID : 7518975621
Option 1 ID : 75189722481
Option 2 ID : 75189722483
Option 3 ID : 75189722482
Option 4 ID : 75189722484
Status : Answered
Chosen Option : 2

Q.76 Which of the following numbers will replace the question mark (?) in the given series?

14, 14, 17, 85, 92, ?

- Ans**
- 1. 924
 - 2. 828
 - 3. 418
 - 4. 628

Question ID : 7518975291
Option 1 ID : 75189721164
Option 2 ID : 75189721163
Option 3 ID : 75189721161
Option 4 ID : 75189721162
Status : Answered
Chosen Option : 2

Q.77 If $5 + x$, $2x + 7$, $6x + 9$, and y are in proportion when $x = 2$, find the value of y .

- Ans**
- 1. 33
 - 2. 28
 - 3. 42
 - 4. 45

Question ID : 7518976270
Option 1 ID : 75189725079
Option 2 ID : 75189725077
Option 3 ID : 75189725078
Option 4 ID : 75189725080
Status : Answered
Chosen Option : 1

Q.78 If '+' means '-', '-' means '+', '*' means 'x' and 'x' means '+', what will come in place of the question mark (?) in the following equation?

$$25 \times 35 - 5 + 7 + 2 = ?$$

- Ans**
- 1. 19
 - 2. 14
 - 3. 16
 - 4. 18

Question ID : 7518975320

Option 1 ID : 75189721280

Option 2 ID : 75189721277

Option 3 ID : 75189721278

Option 4 ID : 75189721279

Status : Answered

Chosen Option : 4

Q.79 V, W, X, Y, Z and A are six singers who have their concerts in different days of the same month, viz. 12th, 14th, 16th, 21st, 25th and 31st of July.

W has his concert on one of the days before X, but not on 21st. V has his concert on 14th. Only A has his concert after X. Y has his concert before V. Who has the concert on 21st of July?

- Ans**
- 1. Z
 - 2. A
 - 3. Y
 - 4. X

Question ID : 7518974915

Option 1 ID : 75189719660

Option 2 ID : 75189719658

Option 3 ID : 75189719657

Option 4 ID : 75189719659

Status : Answered

Chosen Option : 4

Q.80 Which of the following has the maximum non-metallic characters in group 16 elements?

- Ans**
- 1. Po
 - 2. Se
 - 3. S
 - 4. O

Question ID : 7518973533

Option 1 ID : 75189714129

Option 2 ID : 75189714130

Option 3 ID : 75189714132

Option 4 ID : 75189714131

Status : Not Answered

Chosen Option : --

Q.81 A statement is given, followed by four conclusions given in the options. Find out which conclusion is true based on the given statement.

Statement: $G \geq P > T \geq S > K = N < D$

- Ans**
- 1. $P > D$
 - 2. $G \geq D$
 - 3. $G > T$
 - 4. $N > T$

Question ID : 7518975198

Option 1 ID : 75189720790

Option 2 ID : 75189720792

Option 3 ID : 75189720789

Option 4 ID : 75189720791

Status : Answered

Chosen Option : 3

Q.82 Three statements are followed by three conclusions numbered I, II and III. You have to consider these statements to be true, even if they seem at variance from commonly known facts. Decide which of the given conclusions logically follow/s from the given statements.

Statements:

1. All springs are brooks.
2. Some brooks are creeks.
3. No creek is tap.

Conclusions:

- I. Some taps are creeks.
- II. No spring is tap.
- III. Some brooks are springs.

- Ans**
- 1. Only conclusion I follows.
 - 2. Only conclusions III follows.
 - 3. Only conclusions II and III follow.
 - 4. Only conclusions I and II follow.

Question ID : 7518974747

Option 1 ID : 75189718987

Option 2 ID : 75189718988

Option 3 ID : 75189718986

Option 4 ID : 75189718985

Status : Answered

Chosen Option : 2

Q.83 Amit's son was born on 10 January 2012. On what day of the week was he born?

- Ans
- 1. Tuesday
 - 2. Wednesday
 - 3. Monday
 - 4. Thursday

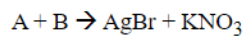
Question ID : 7518976418
Option 1 ID : 75189725670
Option 2 ID : 75189725671
Option 3 ID : 75189725669
Option 4 ID : 75189725672
Status : Answered
Chosen Option : 4

Q.84 The value of $0.1\bar{6} + 0.1\bar{5} - 0.1\bar{3}$ is:

- Ans
- 1. $\frac{17}{90}$
 - 2. $\frac{34}{45}$
 - 3. $\frac{23}{63}$
 - 4. $\frac{19}{99}$

Question ID : 7518976237
Option 1 ID : 75189724948
Option 2 ID : 75189724946
Option 3 ID : 75189724945
Option 4 ID : 75189724947
Status : Answered
Chosen Option : 1

Q.85 What will come in place of A and B, respectively, in the given double displacement reaction?



- Ans
- 1. HBr and NaOH
 - 2. Ag and HNO₃
 - 3. HBr and NaOH
 - 4. AgNO₃ and KBr

Question ID : 7518973442
Option 1 ID : 75189713766
Option 2 ID : 75189713765
Option 3 ID : 75189713768
Option 4 ID : 75189713767
Status : Not Answered
Chosen Option : --

Q.86 Which of the following is NOT a direct tax in India?

- Ans
- 1. Income Tax
 - 2. Corporate tax
 - 3. Excise Tax
 - 4. Capital Gain tax

Question ID : 7518974221
Option 1 ID : 75189716882
Option 2 ID : 75189716884
Option 3 ID : 75189716881
Option 4 ID : 75189716883
Status : Answered
Chosen Option : 3

Q.87

KK Venugopal, the 15th Attorney General of India, received the first extension in his tenure in which of the following years?

- Ans
- 1. 2022
 - 2. 2019
 - 3. 2020
 - 4. 2021

Question ID : 7518973928
Option 1 ID : 75189715710
Option 2 ID : 75189715712
Option 3 ID : 75189715711
Option 4 ID : 75189715709
Status : Answered
Chosen Option : 2

Q.88 If $a : b = 2 : 3$ and $b : c = 3 : 4$, then $a : b : c = ?$

- Ans
- 1. 3 : 4 : 2
 - 2. 2 : 4 : 3
 - 3. 2 : 3 : 4
 - 4. 3 : 2 : 4

Question ID : 7518975834
Option 1 ID : 75189723336
Option 2 ID : 75189723334
Option 3 ID : 75189723335
Option 4 ID : 75189723333
Status : Answered
Chosen Option : 3

Q.89 Which of the following is an example of a human cell that has the ability to modify its shape?

- Ans
- 1. RBC
 - 2. WBC
 - 3. Brain cell
 - 4. Liver cells

Question ID : 7518974365
Option 1 ID : 75189717460
Option 2 ID : 75189717459
Option 3 ID : 75189717457
Option 4 ID : 75189717458
Status : Answered
Chosen Option : 2

Q.90 A ray of light is incident on an interface separating two media along the normal to the interface. The angle between the incident ray and refracted ray is equal to:

- Ans
- 1. 90°
 - 2. 0°
 - 3. 45°
 - 4. 30°

Question ID : 7518975396
Option 1 ID : 75189721584
Option 2 ID : 75189721581
Option 3 ID : 75189721583
Option 4 ID : 75189721582
Status : Answered
Chosen Option : 4

Q.91 Ram is 55 years old and Som is 25 years old. How many years ago was Ram three times as old as Som?

- Ans
- 1. 7 years
 - 2. 15 years
 - 3. 5 years
 - 4. 10 years

Question ID : 7518975719
Option 1 ID : 75189722874
Option 2 ID : 75189722876
Option 3 ID : 75189722873
Option 4 ID : 75189722875
Status : Answered
Chosen Option : 4

Q.92 X and Y can complete a piece of work in 8 days and 12 days, respectively. If they work on alternate days, with X working on the first day, how long will it take the duo to complete the same work?

- Ans**
- ✓ 1. $9\frac{1}{2}$ days
 - ✗ 2. $9\frac{3}{5}$ days
 - ✗ 3. $9\frac{2}{3}$ days
 - ✗ 4. $9\frac{2}{5}$ days

Question ID : 7518975882
 Option 1 ID : 75189723526
 Option 2 ID : 75189723527
 Option 3 ID : 75189723525
 Option 4 ID : 75189723528

Status : Answered
 Chosen Option : 1

Q.93 If $\frac{x}{y} = \frac{3}{2}$, then find $\frac{x^2 + y^2}{x^2 - y^2}$.

- Ans**
- ✗ 1. $\frac{9}{5}$
 - ✗ 2. $\frac{11}{5}$
 - ✓ 3. $\frac{13}{5}$
 - ✗ 4. $\frac{7}{5}$

Question ID : 7518976018
 Option 1 ID : 75189724070
 Option 2 ID : 75189724071
 Option 3 ID : 75189724072
 Option 4 ID : 75189724069

Status : Answered
 Chosen Option : 3

Q.94 Select the set in which the numbers are related in the same way as are the numbers of the following sets.

(NOTE : Operations should be performed on the whole numbers, without breaking down the numbers into its constituent digits. E.g. 13 – Operations on 13 such as adding /deleting /multiplying etc. to 13 can be performed.

Breaking down 13 into 1 and 3 and then performing mathematical operations on 1 and 3 is not allowed)

(4, 25, 6)

(3, 28, 9)

- Ans**
- ✓ 1. (7, 22, 3)
 - ✗ 2. (14, 55, 4)
 - ✗ 3. (3, 81, 6)
 - ✗ 4. (12, 96, 8)

Question ID : 7518975089

Option 1 ID : 75189720354

Option 2 ID : 75189720355

Option 3 ID : 75189720353

Option 4 ID : 75189720356

Status : Answered

Chosen Option : 1

Q.95 Which of the following situations is/are possible?

(a) Magnetic field lines can be parallel to each other.

(b) Magnetic field lines can be concentric circles.

(c) Magnetic field lines can intersect each other.

- Ans**
- ✓ 1. Both (a) and (b)
 - ✗ 2. Only (a)
 - ✗ 3. Both (a) and (c)
 - ✗ 4. Only (b)

Question ID : 7518975514

Option 1 ID : 75189722055

Option 2 ID : 75189722053

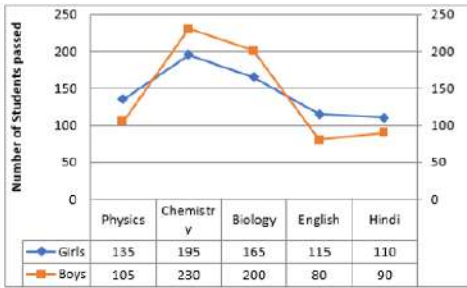
Option 3 ID : 75189722056

Option 4 ID : 75189722054

Status : Answered

Chosen Option : 4

Q.96 The graph and the table below show the number of boys and girls passed in five different subjects i.e. Physics, Chemistry, Biology, English and Hindi.



What is the ratio of the girls who have passed in Physics, Chemistry and Biology respectively?

- Ans**
- ✓ 1. 9 : 13 : 11
 - ✗ 2. 9 : 13 : 8
 - ✗ 3. 8 : 11 : 14
 - ✗ 4. 9 : 15 : 13

Question ID : 7518975333
 Option 1 ID : 75189721329
 Option 2 ID : 75189721332
 Option 3 ID : 75189721331
 Option 4 ID : 75189721330
 Status : Answered
 Chosen Option : 1

Q.97 In February 2022, which state launched open-air classroom 'Paray Shikshalaya'?

- Ans**
- ✗ 1. Punjab
 - ✓ 2. West Bengal
 - ✗ 3. Kerala
 - ✗ 4. Haryana

Question ID : 7518973784
 Option 1 ID : 75189715134
 Option 2 ID : 75189715135
 Option 3 ID : 75189715136
 Option 4 ID : 75189715133
 Status : Answered
 Chosen Option : 3

Q.98 Refer to the following letter series and answer the question.

(Left) T Y A N E C M K E W A F H E Q A P M N B E D H E K U W S D A N M A W E (Right)

How many such consonants are there in the series which are immediately preceded by a vowel and also immediately followed by a vowel?

- Ans**
- 1. Five
 - 2. Four
 - 3. Three
 - 4. Six

Question ID : 7518975229
Option 1 ID : 75189720915
Option 2 ID : 75189720914
Option 3 ID : 75189720913
Option 4 ID : 75189720916
Status : Answered
Chosen Option : 1

Q.99 Which of the following is the prominent language spoken by 8.03% population of India as per 2011 census?

- Ans**
- 1. Gujarati
 - 2. Bengali
 - 3. Marathi
 - 4. Punjabi

Question ID : 7518974010
Option 1 ID : 75189716038
Option 2 ID : 75189716040
Option 3 ID : 75189716039
Option 4 ID : 75189716037
Status : Answered
Chosen Option : 4

Q.100 Three statements are followed by four conclusions numbered I, II, III and IV. You have to consider these statements to be true, even if they seem at variance from commonly known facts. Decide which of the given conclusions logically follow/s from the given statements.

Statements:

1. Some carnations are petunias.
2. All petunias are sunflowers.
3. Some sunflowers are not carnations.

Conclusions:

- I. Some sunflowers are carnations.
- II. All carnations are sunflowers.
- III. All petunias are carnations.
- IV. No sunflower is carnation.

- Ans**
- 1. Only conclusions II and III follow.
 - 2. Only conclusion IV follows.
 - 3. Only conclusions I follows
 - 4. Only conclusions I and IV follow.

Question ID : 7518974744

Option 1 ID : 75189718974

Option 2 ID : 75189718976

Option 3 ID : 75189718973

Option 4 ID : 75189718975

Status : Answered

Chosen Option : 3