

**Constable GD in Central Armed Police Forces CAPFs SSF Rifleman GD in Assam Rifles Examination 2024**

Exam Date	27/02/2024
Exam Time	11:30 AM - 12:30 PM
Subject	Constable GD Examination 2024

## Section : Part-A-General Intelligence and Reasoning

**Q.1** Arrange the following words in alphabetical order:

1. FRAGRANCE
2. FRUITFUL
3. FRUGAL
4. FRIGHTEN
5. FROSTY

- Ans**
- 1. 1,4,5,2,3
  - 2. 1,4,3,5,2
  - 3. 1,4,5,3,2
  - 4. 1,5,4,3,2

**Q.2** Three Statements are given followed by two conclusions numbered I and II. Assuming the statements to be true, even if they seem to be at variance with commonly known facts, decide which of the conclusions logically follow(s) from the statements.

Statement I: Some shirts are cotton.

Statement II: All cotton are clothes.

Statement III: Some clothes are not trousers.

Conclusion I: Some shirts are trousers.

Conclusion II: Some cotton are not shirts.

- Ans**
- 1. Neither conclusion I nor II follows
  - 2. Only conclusion I follows
  - 3. Both conclusions I and II follow
  - 4. Only conclusion II follows

# Test Prime

ALL EXAMS,  
ONE SUBSCRIPTION



**40,000+**  
Mock Tests



Personalised  
Report Card



Unlimited  
Re-Attempt



**500+**  
Exam Covered



Previous Year  
Papers

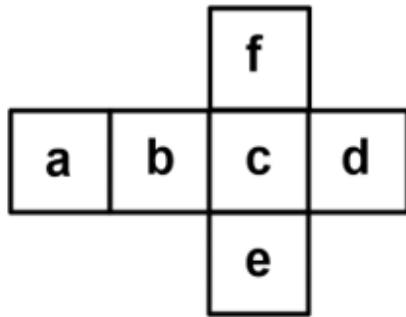


**500%**  
Refund



**DOWNLOAD NOW**

Q.3 On folding the given die, which letter will be opposite to the letter 'c'?



- Ans
- ✓ 1. a
  - ✗ 2. d
  - ✗ 3. b
  - ✗ 4. e

Q.4 Which of the following letter will replace the question mark (?) in the given series?  
H, J, L, N, P, ?

- Ans
- ✓ 1. R
  - ✗ 2. T
  - ✗ 3. Q
  - ✗ 4. O

Q.5 In a certain code language, if AMBER is coded as 36, MAGENTA is coded as 57, then what will PURPLE be coded as?

- Ans
- ✗ 1. 67
  - ✗ 2. 76
  - ✗ 3. 89
  - ✓ 4. 84

Q.6 In the following question, select the figure which can be placed at the sign of question mark (?) from the given alternatives.



Ans

✗ 1.



✗ 2.



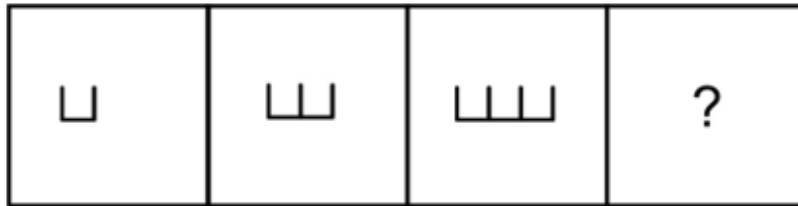
✗ 3.



✓ 4.

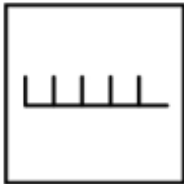


Q.7 Select the figure that will replace the question mark (?) in the following figure series.

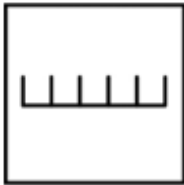


Ans

✗ 1.



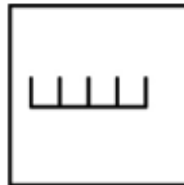
✗ 2.



✗ 3.



✓ 4.



Q.8 In a certain code language, 'MBTSA' is coded as '26095', 'TDAN' is coded as '5328', 'YZBN' is coded as '0713'. What can be the code for 'M' in that code language?

Ans ✓ 1. 6

✗ 2. 2

✗ 3. 5

✗ 4. 0

Q.9 Which of the following numbers will replace the question mark (?) in the given series?  
45, 54, 63, ?, 81, 90

Ans ✗ 1. 68

✗ 2. 70

✓ 3. 72

✗ 4. 58

Q.10 In the following question, select the related letter pair from the given alternatives.

BP : BO :: ?

Ans ✗ 1. NB : JX

✗ 2. EZ : BV

✓ 3. LY : LX

✗ 4. OG : KB

Q.11 Eight boys A, B, C, D, E, F, G and H are sitting around a circular table facing opposite to the centre (not necessarily in the same order). B is fourth to the left of H. Only two boys sit between F and B. E is second to the left of D. F is second to the left of C. C is an immediate neighbour of G. C is not an immediate neighbour of B. Who is sitting on the immediate left of E?

- Ans
- 1. B
  - 2. H
  - 3. A
  - 4. G

Q.12 Which of the following groups of letters when sequentially placed from left to right will complete the given series?  
dddeefff\_dddeefff\_dddeefffdddee\_ff\_

- Ans
- 1. fdef
  - 2. fded
  - 3. edfd
  - 4. ffef

Q.13 In the following question, select the related letters from the given alternatives.

OTYJ : QVAL :: DGKX : ?

- Ans
- 1. JKMP
  - 2. SUTL
  - 3. JJDK
  - 4. FIMZ

Q.14 'T × U' means 'T is the mother of U'

'T + U' means 'T is the sister of U'

'T ÷ U' means 'T is the daughter of U'

'T - U' means 'T is the wife of U'

How is D related to A in the expression 'A × B + C ÷ D'?

- Ans
- 1. Husband
  - 2. Son
  - 3. Father
  - 4. Brother

Q.15 Which two numbers should be interchanged to make the given equation correct?

$$8 \times 4 - 18 \div 2 + 16 = 63$$

- Ans
- 1. 16 and 18
  - 2. 8 and 4
  - 3. 16 and 8
  - 4. 2 and 4

Q.16 By Interchanging the given two numbers (not digits) which of the following equation will be NOT correct?

5 and 8

- Ans
- ✗ 1.  $5 - 8 + 7 = 10$
  - ✗ 2.  $5 + 8 \times 3 - 9 = 14$
  - ✓ 3.  $8 - 5 \times 2 + 6 = -3$
  - ✗ 4.  $5 \times 7 + 8 - 3 = 58$

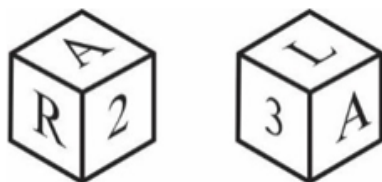
Q.17 Which answer figure will complete the pattern in the question figure? (rotation is not allowed)



Ans

- ✗ 1.
- ✗ 2.
- ✓ 3.
- ✗ 4.

Q.18 Two positions of a dice are given below. What will come on the face opposite to the face containing 'L' on it?



- Ans
- ✗ 1. 2
  - ✓ 2. R
  - ✗ 3. 3
  - ✗ 4. A

Q.19 Five friends P, Q, R, S, and T are sitting around a circular table facing away from the centre. S is sitting to the immediate right of R. P sits exactly between Q and T. Q sits to the immediate left of R. Who sits to the immediate right of P?

- Ans
- 1. R
  - 2. S
  - 3. T
  - 4. Q

Q.20 In the following question, select the missing number from the given series.

344, 348, 357, ?, 398, 434

- Ans
- 1. 370
  - 2. 380
  - 3. 373
  - 4. 371

Section : Part-B-General Knowledge and General awareness

Q.1 Read the following about Liabilities.

- A. Liabilities for any firm are its debts or what it owes to others.
- B. For a bank, the main liability is the deposits which people keep with it.

Identify the CORRECT statement/statements.

- Ans
- 1. Neither A nor B
  - 2. Only A
  - 3. Both A and B
  - 4. Only B

Q.2 What is the total literacy rate of Bihar according to the 2011 census of India?

- Ans
- 1. 61.8 percent
  - 2. 66.8 percent
  - 3. 65.8 percent
  - 4. 63.8 percent

Q.3 Each game in table tennis consists of how many points?

- Ans
- 1. 14
  - 2. 11
  - 3. 21
  - 4. 12



Q.4 In 2023, which Indian-origin scientist won the Spinoza Prize, also known as the Dutch Nobel Prize?

- Ans
- 1. Partha Pratim Majumder
  - 2. D. Sivananda Pai
  - 3. Joyeeta Gupta
  - 4. Usha Barwale-Zehr

Q.5 Which of the following five year plan of India aimed at accelerating food grain production, increasing employment opportunities & raising productivity with focus on 'food, work & productivity'?

- Ans
- 1. Sixth Five year Plan
  - 2. Ninth Five year Plan
  - 3. Seventh Five year Plan
  - 4. Eighth Five year Plan

Q.6 Ministry of Labour & Employment, Government of India launched e-Shram portal (eshram.gov.in) on 26th August

- Ans
- 1. 2021
  - 2. 2023
  - 3. 2022
  - 4. 2020

Q.7 The Rowlatt Act of 1919 granted the British colonial government the power to arrest and detains Indians without trial. Who was the British Viceroy of India at that time?

- Ans
- 1. Lord Irwin
  - 2. Lord Curzon
  - 3. Lord Chelmsford
  - 4. Lord Dalhousie

Q.8 Under the Deen Dayal Upadhyaya Grameen Kaushalya Yojana (DDU-GKY), in Chhattisgarh, how many candidates have been trained as on August 01, 2023?

- Ans
- 1. 45,825
  - 2. 85,208
  - 3. 61,199
  - 4. 30,502

Q.9 Which of following tribes celebrates the Rongker festival?

- Ans
- 1. Dimsa
  - 2. Khasi
  - 3. Karbi
  - 4. Tiwa

Q.10 Read the following about the Green Revolution in India.

A. The revolution was launched to address India's hunger crisis during the second Five Year Plan.

B. The long term objectives included overall agriculture modernization based on rural development, industrial development; infrastructure, raw material etc.

Identify the CORRECT statement/statements.

- Ans
- 1. Both A and B
  - 2. Neither A nor B
  - 3. Only A
  - 4. Only B

Q.11 Which state is famous for Dandiya-ras dance?

- Ans
- 1. Bihar
  - 2. Gujarat
  - 3. Odisha
  - 4. Kerala

Q.12 How is the poverty line in India typically determined?

- Ans
- 1. Religious affiliation
  - 2. Access to healthcare facilities
  - 3. Levels of income and consumption
  - 4. Quality of education

Q.13 In humans sound is produced by voice box. What is the other name used for voice box?

- Ans
- 1. Wind pipe
  - 2. Larynx
  - 3. Pharynx
  - 4. Lymph Nodes

Q.14 Which of the following sports is played by Mithali Raj?

- Ans
- 1. Hockey
  - 2. Cricket
  - 3. Volleyball
  - 4. Badminton

Q.15 \_\_\_\_\_ choreographed famous song 'Kahe Chhed Mohe' from the movie Devdas and 'Mohe Rang Do Laal' from Bajirao Mastani.

- Ans
- 1. Uday Shankar
  - 2. Pandit Birju Maharaj
  - 3. Kelucharan Mohapatra
  - 4. Rukmini Devi

Q.16 The election of the Constituent Assembly of India was held in \_\_\_\_\_.

- Ans
- 1. May 1946
  - 2. March 1946
  - 3. April 1946
  - 4. July 1946

Q.17 Which Indian has won two Oscars in the same year?

- Ans
- 1. Resul Pookutty
  - 2. MM Keeravani
  - 3. Gulzar
  - 4. A R Rahman

Q.18 The Palaeolithic period extends from 2 million years ago to about 12,000 years ago. This long stretch of time is divided into the Lower, Middle and Upper Palaeolithic. This long span of time covers \_\_\_\_\_ percent of human history.

- Ans
- 1. 99
  - 2. 59
  - 3. 79
  - 4. 89

Q.19 Which sport is played by the Indian sportsperson Jasprit Bumrah?

- Ans
- 1. Hockey
  - 2. Cricket
  - 3. Volleyball
  - 4. Football

Q.20 Which of the following articles of the Indian Constitution mentions oath or affirmation by the Governor?

- Ans
- 1. Article 155
  - 2. Article 157
  - 3. Article 159
  - 4. Article 161

Section : Part-C-Elementary Mathematics

Q.1 A pair of shoes is sold for ₹960 after a discount of 25%. Find the marked price.

- Ans
- 1. Rs. 1280
  - 2. Rs. 1240
  - 3. Rs. 1220
  - 4. Rs. 1200

Q.2 Find the area of an equilateral triangle with a side length of 10 cm.

- Ans
- 1.  $28\sqrt{3}$  cm<sup>2</sup>
  - 2.  $25\sqrt{3}$  cm<sup>2</sup>
  - 3.  $18\sqrt{3}$  cm<sup>2</sup>
  - 4.  $22\sqrt{3}$  cm<sup>2</sup>

Q.3 The price of a bike is firstly decreased by 25 percent and then increased by 50 percent. What is the percentage increase in the price of bike?

- Ans
- 1. 25 percent
  - 2. 20 percent
  - 3. 12.5 percent
  - 4. 10 percent

Q.4 Average of five numbers is 75. The average of first two numbers is 6 times of the average of last three numbers. What is the sum of first two numbers?

- Ans
- 1. 300
  - 2. 260
  - 3. 340
  - 4. 315

Q.5 A person loses 35 percent on selling a book for Rs. 2860. At what price should he sell the book to earn a profit of 20 percent?

- Ans
- 1. Rs. 5460
  - 2. Rs. 5540
  - 3. Rs. 6460
  - 4. Rs. 5280

Q.6 At what rate per annum will ₹ 33,000 yield a compound interest of ₹ 31,680 in 2 years interest being compounded yearly?

- Ans
- 1. 55%
  - 2. 40%
  - 3. 50%
  - 4. 30%

Q.7 The marked price of an article is 60 percent more than its cost price. If the article is sold for Rs. 300 after offering a discount of Rs. 20, then what will be the profit percentage?

- Ans
- 1. 45 percent
  - 2. 50 percent
  - 3. 60 percent
  - 4. 40 percent

Q.8 Find the LCM of 1.2, 1.8, 2, 2.5.

- Ans
- 1. 30
  - 2. 120
  - 3. 90
  - 4. 25

Q.9 What is the value of 9 of  $21 \times (3 + 4)$ ?

- Ans
- 1. 1323
  - 2. 1763
  - 3. 1423
  - 4. 1533

Q.10 A shirt was sold for \$40, incurring a loss of 20%. Find the cost price.

- Ans
- 1. \$50
  - 2. \$35
  - 3. \$55
  - 4. \$30

Q.11 If a certain sum of money becomes thrice of itself in 7 years 3 months at simple interest, then what will be the annual rate of interest?

- Ans
- 1. 25.68 percent
  - 2. 29.27 percent
  - 3. 30.23 percent
  - 4. 27.58 percent

Q.12 Prince is thrice as good a workman as Raman and therefore is able to finish a work in 28 days less than Raman. In how many days can they together complete the same work?

- Ans
- 1. 42 days
  - 2. 35 days
  - 3. 30 days
  - 4. 10.5 days

Q.13 The average of 36 numbers is 50. If we subtract a number 'T' from each number, then the average becomes 27. What is the value of T?

- Ans
- 1. 27
  - 2. 24
  - 3. 22
  - 4. 23

Q.14 What is the value of  $444 \div 2 + 41 \times 8 - 26 \times 3$ ?

- Ans
- 1. 472
  - 2. 452
  - 3. 462
  - 4. 482

Q.15 If price is decreased by 24 percent, then by how much percentage consumption should be increased, so that the expenditure remains the same?

- Ans
- 1. 28.5 percent
  - 2. 31.5 percent
  - 3. 25.5 percent
  - 4. 26.5 percent

Q.16 If the number 34564A is divisible by 11, then what is the value of A?

- Ans
- 1. 7
  - 2. 3
  - 3. 6
  - 4. 2

Q.17 A bike moving at a speed of 45 km/hr covers certain distance in 4 hours. If its speed is reduced by 20 km/hr, in what time it will cover the same distance?

- Ans
- 1. 432 minutes
  - 2. 460 minutes
  - 3. 478 minutes
  - 4. 446 minutes

Q.18 Three numbers A, B and C are in the ratio of 5 : 4 : 3 respectively. If C is 18 less than the sum of A and B, then what is the value of B?

- Ans
- 1. 15
  - 2. 9
  - 3. 18
  - 4. 12

Q.19 Three numbers are in the ratio of 3 : 5 : 8. If the sum of the largest and the smallest number is 8800, then what is the difference of the largest and the smallest number?

- Ans
- 1. 4000
  - 2. 1600
  - 3. 800
  - 4. 2400

Q.20 M and N together can complete a work in 40 days. M is 50 percent more efficient than N. M alone can complete the same work in how many days?

- Ans
- 1.  $210/11$  days
  - 2.  $100/7$  days
  - 3.  $100/9$  days
  - 4.  $200/3$  days

Q.1 Improve the underlined part of the sentence. Choose 'No improvement' as an answer if the sentence is grammatically correct.

I wheeled a recycles bin to the curb.

- Ans
- ✓ 1. recycling bin
  - ✗ 2. No improvement
  - ✗ 3. recycled bins
  - ✗ 4. recycling bins

Q.2 Select the most appropriate word to fill in the blank.

The Internet is an \_\_\_\_\_ resource for teachers.

- Ans
- ✓ 1. invaluable
  - ✗ 2. inimical
  - ✗ 3. auspicious
  - ✗ 4. antique

Q.3 Choose the most appropriate antonym of the underlined word.

Many of her students live in two- or three-bedroom apartments with families of up to eight people, creating an environment rife with distractions.

- Ans
- ✗ 1. replete
  - ✗ 2. thick
  - ✓ 3. void
  - ✗ 4. alive

Q.4 Select the incorrectly spelt word from the given sentence.

I am studying about insects in zoology, and I have learned many things about butterflies.

- Ans
- ✗ 1. insects
  - ✗ 2. studying
  - ✓ 3. butterflys
  - ✗ 4. learned

Q.5 Find the part of the given sentence that has an error in it. If there is no error, choose 'No error'.

Visitors to Chernobyl are advised not to touching the dogs.

- Ans
- ✓ 1. touching the dogs.
  - ✗ 2. No error
  - ✗ 3. are advised not to
  - ✗ 4. Visitors to Chernobyl

Q.6 Improve the underlined part of the sentence. Choose 'No improvement' as an answer if the sentence is grammatically correct.

I can't getting my wife to go swimming.

- Ans
- 1. gets my
  - 2. No improvement
  - 3. get my
  - 4. get I

Q.7 Find the part of the given sentence that has an error in it. If there is no error, choose 'No error'.

You can learn about the well ways to make money.

- Ans
- 1. about the well
  - 2. You can learn
  - 3. No error
  - 4. ways to make money.

Q.8 Find the part of the given sentence that has an error in it. If there is no error, choose 'No error'.

To prevent boredom and keep it away, we need to find solutions at home that will provides lasting meaning and challenge to our lives.

- Ans
- 1. No error
  - 2. lasting meaning and challenge to our lives.
  - 3. To prevent boredom and keep it away,
  - 4. we need to find solutions at home that will provides

Q.9 Choose the idiom/phrase that can substitute the highlighted group of words meaningfully.

He is the director's **favourite boy**.

- Ans
- 1. Blue eyed boy
  - 2. Good old boy
  - 3. Break a leg
  - 4. Above board

Q.10 Select the most appropriate option for the given blank.

Please \_\_\_\_\_ quiet, everyone; the principal will be here anytime.

- Ans
- 1. make
  - 2. keep
  - 3. have
  - 4. set



Q.11 Choose the most appropriate synonym of the underlined word.

Some depended on small donations, others on the benevolence of wealthy patrons.

- Ans
- 1. Cruelty
  - 2. Divinity
  - 3. Harshness
  - 4. Kindness

Q.12 Improve the underlined part of the sentence. Choose 'No improvement' as an answer if the sentence is grammatically correct.

Their dog chewed in the furniture.

- Ans
- 1. No improvement
  - 2. chew on
  - 3. chewing on
  - 4. chewed on

Q.13 Select the most appropriate meaning of the given idiom.

Lend an ear

- Ans
- 1. To go to remote places.
  - 2. To lend something important.
  - 3. Impossible task
  - 4. To listen closely.

Q.14 Four words are given, out of which only one word is spelt correct. Choose the correct spelt word.

- Ans
- 1. PERCIEVE
  - 2. MEMENTO
  - 3. OUTRAGOUS
  - 4. PLAGERIZE

Q.15 Choose the word that is opposite in meaning to the given word.

Arrival

- Ans
- 1. Inception
  - 2. Genesis
  - 3. Departure
  - 4. Amass

**Comprehension:**

Read the passage carefully and select the correct answer for the given blanks out of the four alternatives.

The deep depression over the west-central Bay of Bengal is likely to (1)\_\_\_\_\_ into a cyclonic storm by November 17 morning, said Uma Shankar Das, senior scientist in India Meteorological Department's Bhubaneswar regional centre. Under the (2)\_\_\_\_\_ of the system, heavy to moderate rain may occur in some parts of Odisha, (3)\_\_\_\_\_ to sources. Paddy farmers in Odisha have already been suffering from moisture stress due to (4)\_\_\_\_\_ rainfall in Ganjam and Gajapati districts, while pest attacks have been reported in western Odisha districts. Unseasonal rains at the time of the harvest will (5)\_\_\_\_\_ all hopes of a successful crop, said a farmer.

**SubQuestion No : 16**

Q.16 Select the most appropriate option for blank (1)

- Ans
- 1. manipulate
  - 2. intensify
  - 3. derive
  - 4. plus

**Comprehension:**

Read the passage carefully and select the correct answer for the given blanks out of the four alternatives.

The deep depression over the west-central Bay of Bengal is likely to (1)\_\_\_\_\_ into a cyclonic storm by November 17 morning, said Uma Shankar Das, senior scientist in India Meteorological Department's Bhubaneswar regional centre. Under the (2)\_\_\_\_\_ of the system, heavy to moderate rain may occur in some parts of Odisha, (3)\_\_\_\_\_ to sources. Paddy farmers in Odisha have already been suffering from moisture stress due to (4)\_\_\_\_\_ rainfall in Ganjam and Gajapati districts, while pest attacks have been reported in western Odisha districts. Unseasonal rains at the time of the harvest will (5)\_\_\_\_\_ all hopes of a successful crop, said a farmer.

**SubQuestion No : 17**

Q.17 Select the most appropriate option for blank (2)

- Ans
- 1. influence
  - 2. guidance
  - 3. hospitality
  - 4. toll

**Comprehension:**

Read the passage carefully and select the correct answer for the given blanks out of the four alternatives.

The deep depression over the west-central Bay of Bengal is likely to (1)\_\_\_\_\_ into a cyclonic storm by November 17 morning, said Uma Shankar Das, senior scientist in India Meteorological Department's Bhubaneswar regional centre. Under the (2)\_\_\_\_\_ of the system, heavy to moderate rain may occur in some parts of Odisha, (3)\_\_\_\_\_ to sources. Paddy farmers in Odisha have already been suffering from moisture stress due to (4)\_\_\_\_\_ rainfall in Ganjam and Gajapati districts, while pest attacks have been reported in western Odisha districts. Unseasonal rains at the time of the harvest will (5)\_\_\_\_\_ all hopes of a successful crop, said a farmer.

**SubQuestion No : 18**

Q.18 Select the most appropriate option for blank (3)

- Ans
- 1. according
  - 2. alike
  - 3. congruent
  - 4. stated

**Comprehension:**

Read the passage carefully and select the correct answer for the given blanks out of the four alternatives.

The deep depression over the west-central Bay of Bengal is likely to (1)\_\_\_\_\_ into a cyclonic storm by November 17 morning, said Uma Shankar Das, senior scientist in India Meteorological Department's Bhubaneswar regional centre. Under the (2)\_\_\_\_\_ of the system, heavy to moderate rain may occur in some parts of Odisha, (3)\_\_\_\_\_ to sources. Paddy farmers in Odisha have already been suffering from moisture stress due to (4)\_\_\_\_\_ rainfall in Ganjam and Gajapati districts, while pest attacks have been reported in western Odisha districts. Unseasonal rains at the time of the harvest will (5)\_\_\_\_\_ all hopes of a successful crop, said a farmer.

**SubQuestion No : 19**

Q.19 Select the most appropriate option for blank (4)

- Ans
- 1. adept
  - 2. plenty
  - 3. inadequate
  - 4. round

**Comprehension:**

Read the passage carefully and select the correct answer for the given blanks out of the four alternatives.

The deep depression over the west-central Bay of Bengal is likely to (1)\_\_\_\_\_ into a cyclonic storm by November 17 morning, said Uma Shankar Das, senior scientist in India Meteorological Department's Bhubaneswar regional centre. Under the (2)\_\_\_\_\_ of the system, heavy to moderate rain may occur in some parts of Odisha, (3)\_\_\_\_\_ to sources. Paddy farmers in Odisha have already been suffering from moisture stress due to (4)\_\_\_\_\_ rainfall in Ganjam and Gajapati districts, while pest attacks have been reported in western Odisha districts. Unseasonal rains at the time of the harvest will (5)\_\_\_\_\_ all hopes of a successful crop, said a farmer.

**SubQuestion No : 20**

Q.20 Select the most appropriate option for blank (5)

- Ans
- 1. clasp
  - 2. piece
  - 3. form
  - 4. shatter

**Section : Part-D-Hindi**

Q.1 निम्नलिखित प्रश्न में, दिए गए चार विकल्पों में से, उस विकल्प का चयन करें जो दिए गए मुहावरे के अर्थ को सर्वश्रेष्ठ रूप से व्यक्त करता है।

उड़ती चिड़िया पहचानना

- Ans
- 1. बिलकुल धूर्त होना
  - 2. बहुत अनुभवी होना
  - 3. प्रकृति प्रेमी होना
  - 4. बड़ी-बड़ी बातें करना

Q.2 निम्नलिखित प्रश्न में, चार विकल्पों में से, उस विकल्प का चयन करें जो रिक्त स्थान के लिए सही भाववाचक संज्ञा वाला विकल्प हो।

मेरा भाई इतना \_\_\_\_\_ है कि सामान कहीं भी रखकर भूल जाता है।

- Ans
- ✗ 1. लुटेरा
  - ✗ 2. बेकार
  - ✓ 3. भुलक्कड़
  - ✗ 4. बुद्ध

Q.3 दिए गए वाक्य में रेखांकित शब्द के लिए सही वर्तनी ज्ञात कीजिए।

भारत के बहुत से वैग्यानिक विदेश गए हैं।

- Ans
- ✓ 1. वैज्ञानिक
  - ✗ 2. वेज्ञानीक
  - ✗ 3. वैज्ञानीक
  - ✗ 4. वेज्ञानिक

Q.4 दिए गए वाक्यांश के लिए सार्थक शब्द ज्ञात कीजिए।

ऊपर कहा गया

- Ans
- ✗ 1. निम्नलिखित
  - ✗ 2. ऊपरोक्त
  - ✓ 3. उपर्युक्त
  - ✗ 4. खंड

Q.5 निम्नलिखित प्रश्न में, दिए गए चार विकल्पों में से, उस विकल्प का चयन करें जो दिए गए मुहावरे के अर्थ को सर्वश्रेष्ठ रूप से व्यक्त करता है।

सीधे मुँह बात न करना

- Ans
- ✗ 1. हर समय मजाक करना
  - ✗ 2. मुद्दे की बात न करना
  - ✓ 3. अभिमान से बात करना
  - ✗ 4. अत्यंत बीमार होना

Q.6 दिए गए वाक्य में रेखांकित शब्द का तद्भव शब्द ज्ञात कीजिए।

ढाई आखर प्रेम के मानव को बदल सकते हैं।

- Ans
- ✓ 1. अक्षर
  - ✗ 2. सक्षम
  - ✗ 3. अजगर
  - ✗ 4. अगर

Q.7 दिए गए वाक्य में उचित पर्यायवाची शब्द का चयन करके रिक्त स्थान की पूर्ति करें।

इस पाठ का \_\_\_\_\_ (सारांश) निकालें।

- Ans
- 1. मनोज
  - 2. निचोड़
  - 3. निश्चित
  - 4. दिवाकर

Q.8 निम्नलिखित वाक्य में, उस वाक्यांश को पहचानिए जिसमें मात्राओं से संबंधित अशुद्धियाँ हैं। यदि कोई गलती नहीं है तो 'कोई त्रुटि नहीं है' का चुनाव कीजिए।  
विश्व जनसंख्या दिवस मनाने का मुख्य उद्देश्य वर्तमान में/ बढ़ती आबादी के कारण होने वाले दुष्प्रभावों और इससे जुड़े/ अन्य मुद्दों और इसके महत्व पर ध्यान केंद्रित करना है।

- Ans
- 1. कोई त्रुटि नहीं है
  - 2. बढ़ती आबादी के कारण होने वाले दुष्प्रभावों और इससे जुड़े
  - 3. अन्य मुद्दों और इसके महत्व पर ध्यान केंद्रित करना है
  - 4. विश्व जनसंख्या दिवस मनाने का मुख्य उद्देश्य वर्तमान में

Q.9 निम्नलिखित प्रश्न में, चार विकल्पों में से, उस विकल्प का चयन करें जो रिक्त स्थान के लिए सही शब्द वाला विकल्प हो।

पिछले कुछ वर्षों में विज्ञान और टेक्नोलॉजी के कारण कृषि क्षेत्र में नवीन \_\_\_\_\_ का इस्तेमाल होने लगा है

- Ans
- 1. प्रकरणों
  - 2. उपकरणों
  - 3. मवेशियों
  - 4. व्यक्तियों

Q.10 निम्नलिखित वाक्य में रेखांकित भाग के लिए एक शब्द ज्ञात कीजिए।

उस साधु का कोई शत्रु नहीं था।

- Ans
- 1. सर्वप्रिय
  - 2. सर्वमित्र
  - 3. अजातशत्रु
  - 4. अशत्रु

Q.11 निम्नलिखित प्रश्न में, चार विकल्पों में से, उस विकल्प का चयन करें जो कोष्ठक में दिए गए शब्द के पर्यायवाची शब्द का सही विकल्प नहीं है।

कुछ ही दिनों में, ईश्वर की कृपा से मेरा शरीर तुम लोगों की दृष्टि से (ओझल) \_\_\_\_\_ हो जायेगा।

- Ans
- ✗ 1. अदृश्य
  - ✗ 2. विलुप्त
  - ✓ 3. बिनौरा
  - ✗ 4. अंतर्धान

Q.12 दिए गए वाक्य में रेखांकित शब्द का विलोम शब्द ज्ञात कीजिए।

आपको उनसे औपचारिकता से मिलना चाहिए था।

- Ans
- ✗ 1. मर्यादा
  - ✓ 2. अनौपचारिकता
  - ✗ 3. अनौद्योगिक
  - ✗ 4. अनौचित्य

Q.13 दिए गए वाक्य में से निरर्थक शब्द ज्ञात कीजिए।

तुम रुको। मैं घूमते-घामते सामान ले आऊँगा।

- Ans
- ✗ 1. आऊँगा
  - ✓ 2. घूमते-घामते
  - ✗ 3. सामान
  - ✗ 4. रुको

Q.14 दिए गए वाक्य में रेखांकित शब्द का विलोम शब्द ज्ञात कीजिए।

पक्षपात करना अच्छी बात नहीं है।

- Ans
- ✗ 1. विग्रय
  - ✓ 2. निष्पक्षता
  - ✗ 3. खण्ड
  - ✗ 4. अलग

Q.15 निम्नलिखित प्रश्न में, चार विकल्पों में से, उस विकल्प का चयन करें जो रिक्त स्थान के लिए सही पुल्लिंग रूप वाला विकल्प हो।

मैंने आज ही एक बहुत सुंदर \_\_\_\_\_ देखा।

- Ans
- ✗ 1. मंजिल
  - ✗ 2. किताब
  - ✓ 3. नक्शा
  - ✗ 4. कुर्सी

**Comprehension:**

नीचे दिए गए गद्य में कुछ शब्द छोड़ दिए गए हैं और प्रत्येक रिक्त स्थान के चार विकल्प दिए गए हैं। इन चारों में से कौन सा विकल्प रिक्त स्थान की पूर्ति करेगा-

वित्त मंत्रालय ने देश के सभी सरकारी बैंको को अपनी साइबर (1)\_\_\_\_\_ की समीक्षा और उसे (2)\_\_\_\_\_ करने की जो सलाह दी, उस पर अमल भी (3)\_\_\_\_\_ किया जाना चाहिए। यह इसलिए आवश्यक है, क्योंकि बैंको की साइबर सुरक्षा में (4)\_\_\_\_\_ लगती ही रहती है। साइबर हमलों में भारत के भी विभिन्न (5)\_\_\_\_\_ हैं।

**SubQuestion No : 16**

Q.16 रिक्त (1) के लिए सबसे उपयुक्त विकल्प का चयन कीजिए।

- Ans
- ✗ 1. निराशा
  - ✗ 2. आरक्षण
  - ✗ 3. वसूली
  - ✓ 4. सुरक्षा

**Comprehension:**

नीचे दिए गए गद्य में कुछ शब्द छोड़ दिए गए हैं और प्रत्येक रिक्त स्थान के चार विकल्प दिए गए हैं। इन चारों में से कौन सा विकल्प रिक्त स्थान की पूर्ति करेगा-

वित्त मंत्रालय ने देश के सभी सरकारी बैंको को अपनी साइबर (1)\_\_\_\_\_ की समीक्षा और उसे (2)\_\_\_\_\_ करने की जो सलाह दी, उस पर अमल भी (3)\_\_\_\_\_ किया जाना चाहिए। यह इसलिए आवश्यक है, क्योंकि बैंको की साइबर सुरक्षा में (4)\_\_\_\_\_ लगती ही रहती है। साइबर हमलों में भारत के भी विभिन्न (5)\_\_\_\_\_ हैं।

**SubQuestion No : 17**

Q.17 रिक्त (2) के लिए सबसे उपयुक्त विकल्प का चयन कीजिए।

- Ans
- ✗ 1. ढीली
  - ✓ 2. मजबूत
  - ✗ 3. छोटी
  - ✗ 4. लंबी

**Comprehension:**

नीचे दिए गए गद्य में कुछ शब्द छोड़ दिए गए हैं और प्रत्येक रिक्त स्थान के चार विकल्प दिए गए हैं। इन चारों में से कौन सा विकल्प रिक्त स्थान की पूर्ति करेगा-

वित्त मंत्रालय ने देश के सभी सरकारी बैंको को अपनी साइबर (1)\_\_\_\_\_ की समीक्षा और उसे (2)\_\_\_\_\_ करने की जो सलाह दी, उस पर अमल भी (3)\_\_\_\_\_ किया जाना चाहिए। यह इसलिए आवश्यक है, क्योंकि बैंको की साइबर सुरक्षा में (4)\_\_\_\_\_ लगती ही रहती है। साइबर हमलों में भारत के भी विभिन्न (5)\_\_\_\_\_ हैं।

**SubQuestion No : 18**

Q.18 रिक्त (3) के लिए सबसे उपयुक्त विकल्प का चयन कीजिए।

- Ans
- ✓ 1. सुनिश्चित
  - ✗ 2. दुर्गम
  - ✗ 3. दुर्जन
  - ✗ 4. अनर्थ

**Comprehension:**

नीचे दिए गए गद्य में कुछ शब्द छोड़ दिए गए हैं और प्रत्येक रिक्त स्थान के चार विकल्प दिए गए हैं। इन चारों में से कौन सा विकल्प रिक्त स्थान की पूर्ति करेगा-

वित्त मंत्रालय ने देश के सभी सरकारी बैंको को अपनी साइबर (1)\_\_\_\_\_ की समीक्षा और उसे (2)\_\_\_\_\_ करने की जो सलाह दी, उस पर अमल भी (3)\_\_\_\_\_ किया जाना चाहिए। यह इसलिए आवश्यक है, क्योंकि बैंको की साइबर सुरक्षा में (4)\_\_\_\_\_ लगती ही रहती है। साइबर हमलों में भारत के भी विभिन्न (5)\_\_\_\_\_ हैं।

**SubQuestion No : 19**

Q.19 रिक्त (4) के लिए सबसे उपयुक्त विकल्प का चयन कीजिए।

- Ans
- ✗ 1. चमचम
  - ✗ 2. चमकीला
  - ✓ 3. सेंध
  - ✗ 4. प्राथना

**Comprehension:**

नीचे दिए गए गद्य में कुछ शब्द छोड़ दिए गए हैं और प्रत्येक रिक्त स्थान के चार विकल्प दिए गए हैं। इन चारों में से कौन सा विकल्प रिक्त स्थान की पूर्ति करेगा-

वित्त मंत्रालय ने देश के सभी सरकारी बैंको को अपनी साइबर (1)\_\_\_\_\_ की समीक्षा और उसे (2)\_\_\_\_\_ करने की जो सलाह दी, उस पर अमल भी (3)\_\_\_\_\_ किया जाना चाहिए। यह इसलिए आवश्यक है, क्योंकि बैंको की साइबर सुरक्षा में (4)\_\_\_\_\_ लगती ही रहती है। साइबर हमलों में भारत के भी विभिन्न (5)\_\_\_\_\_ हैं।

**SubQuestion No : 20**

Q.20 रिक्त (5) के लिए सबसे उपयुक्त विकल्प का चयन कीजिए।

- Ans
- ✗ 1. प्रदेश
  - ✗ 2. स्वदेश
  - ✗ 3. विदेश
  - ✓ 4. संस्थान