

Constable GD in Central Armed Police Forces CAPFs SSF Rifleman GD in Assam Rifles Examination 2024

Exam Date	24/02/2024
Exam Time	5:00 PM - 6:00 PM
Subject	Constable GD Examination 2024

Section : Part-A-General Intelligence and Reasoning

Q.1 If 35 A 18 B 5 C 10 = 115 and 41 A 23 B 7 C 15 = 187, then 8 A 4 B 5 C 9 = ?

- Ans
- 1. 17
 - 2. 19
 - 3. 27
 - 4. 21

Q.2 In the following question, select the figure which can be placed at the sign of question mark (?) from the given alternatives.

Y Z	O Y	P O	?
O	P Z	Y	
P	K	L K Z	

Ans

- 1.

P	O
K	Y
L	T Z
- 2.

	Z P
L	O
K	T Y
- 3.

T	P O
L	
Y	K Z
- 4.

T	P O
L	
K	Z Y

Test Prime

ALL EXAMS,
ONE SUBSCRIPTION



40,000+
Mock Tests



Personalised
Report Card



Unlimited
Re-Attempt



500+
Exam Covered



Previous Year
Papers



500%
Refund



DOWNLOAD NOW

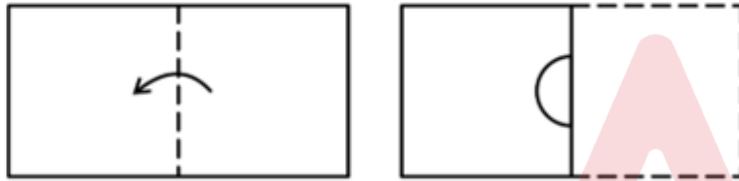
Q.3 In a certain code language, if CARROT is coded as 81, BROCCOLI is coded as 85, then what will MUSHROOM be coded as?

- Ans
- ✓ 1. 130
 - ✗ 2. 97
 - ✗ 3. 102
 - ✗ 4. 128

Q.4 Pointing towards a photo of a girl, Rekha said, "She is the daughter of my brother's father". How girl is related to Rekha?

- Ans
- ✓ 1. Sister
 - ✗ 2. Mother
 - ✗ 3. Sister in law
 - ✗ 4. Grandmother

Q.5 A paper is folded and cut as shown below. How will it appear when unfolded?



Ans

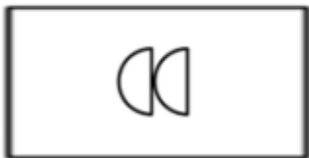
✗ 1.



✗ 2.



✗ 3.



✓ 4.

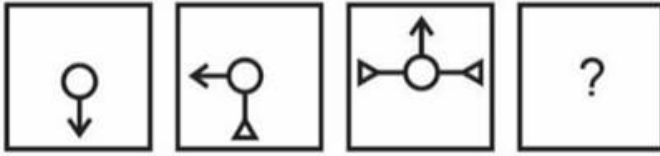


Q.6 In the following question, select the related letters from the given alternatives.

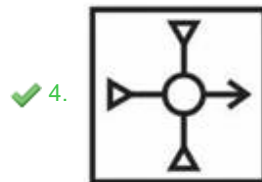
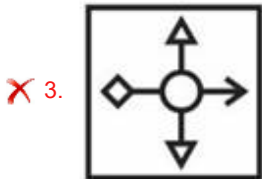
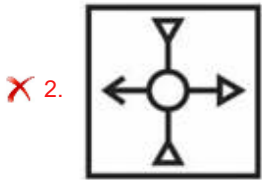
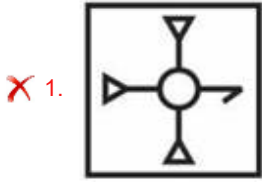
LY : KV :: JW : ?

- Ans
- ✓ 1. IT
 - ✗ 2. UZ
 - ✗ 3. WX
 - ✗ 4. UV

Q.7 In the following question, select the figure which can be placed at the sign of question mark (?) from the given alternatives.



Ans



Q.8 In the following question, select the missing number from the given series.

30, 28, 24, 16, 0, ?

- Ans
- ✗ 1. -40
 - ✗ 2. -35
 - ✗ 3. -30
 - ✓ 4. -32

Q.9 Which two signs should be interchanged to make the given equation correct?

$$10 = 3 \div 2 - 5 + 1 \times 11$$

- Ans
- ✓ 1. \times and $=$
 - ✗ 2. $=$ and $-$
 - ✗ 3. \times and \div
 - ✗ 4. $+$ and $-$

Q.10 Five friends P, B, C, G and H are sitting around a circular table facing towards the centre. B is sitting to the immediate left of C. G is not the immediate neighbour of C. H is sitting second to the right of P. Who is sitting on the immediate right of P?

- Ans**
- ✓ 1. G
 - ✗ 2. B
 - ✗ 3. C
 - ✗ 4. H

Q.11 In the following question below are given some statements followed by some conclusions based on those statements. Taking the given statements to be true even if they seem to be at variance from commonly known facts. Read all the conclusions and then decide which of the given conclusion(s) logically follows the given statements.

Statements:

I. No red is black.

II. No rat is black.

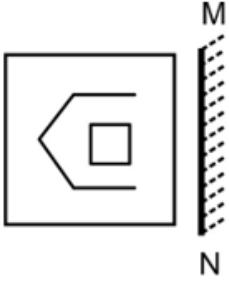
Conclusions:

I. Some rat are not red.

II. Some red are black.

- Ans**
- ✓ 1. Neither conclusion follows
 - ✗ 2. Only conclusion II follows
 - ✗ 3. Both conclusions I and II follows
 - ✗ 4. Only conclusion I follows

Q.12 Select the correct mirror image of the given figure when the mirror MN is placed to the right side of the figure.



Ans

✗ 1.



✗ 2.



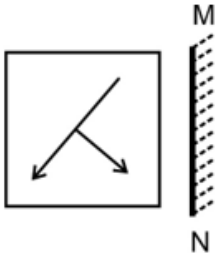
✗ 3.



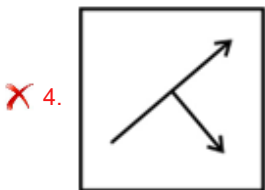
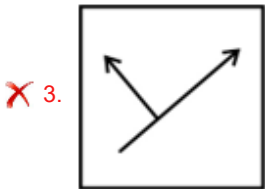
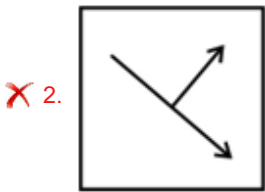
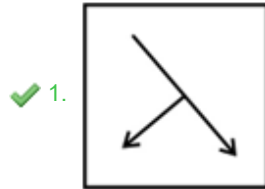
✓ 4.



Q.13 Select the correct mirror image of the given figure when the mirror MN is placed to the right side of the figure.



Ans



Q.14 In the following question, select the related letter pair from the given alternatives.

FCQ : BYM :: ?

- Ans
- ✗ 1. PQR : LMM
 - ✗ 2. ZOB : OQT
 - ✗ 3. WWX : FIJ
 - ✓ 4. AMG : WIC

Q.15 Which of the following numbers will replace the question mark (?) in the given series?

33, ?, 32, 44, 31, 45

- Ans
- ✗ 1. 42
 - ✗ 2. 34
 - ✓ 3. 43
 - ✗ 4. 31

Q.16 In a certain code language, if LEFT is coded as JCDRI, RIGHT is coded as PGEFR1, then what will STRAIGHT be coded as?

- Ans**
- 1. RFEGQYPR3
 - 2. QRPYGEFR3
 - 3. RFEGQYPR2
 - 4. QRPYGEFR2

Q.17 A series is given with one term missing. Select the correct alternative from the given ones that will complete the series.
PMNT, TQRX, XUVB, BYZF, ?

- Ans**
- 1. FCDJ
 - 2. ECDQ
 - 3. FNMR
 - 4. EMRM

Q.18 Five colleagues Emma, Ethan, Grace, Hannah, and Isaac are sitting on a circular table facing towards the center. Hannah sits in between Emma and Grace. Isaac sits to the right of Ethan. Ethan and Emma are not neighbors. Who sits to the immediate left of Grace?

- Ans**
- 1. Hannah
 - 2. Emma
 - 3. Ethan
 - 4. Isaac

Q.19 Arrange the given words in alphabetical order:

1. Cook
2. Book
3. Took
4. Look
5. Shook

- Ans**
- 1. 5,1,4,2,3
 - 2. 2,5,4,1,3
 - 3. 2,3,1,4,5
 - 4. 2,1,4,5,3

Q.20 Which one set of letters when sequentially placed at the gaps in the given letter series shall complete it?
bc_bccbcc__ccccc

- Ans**
- 1. cccc
 - 2. ccbc
 - 3. cbcc
 - 4. cccb

Q.1 Article 51A (i) of the Indian Constitution is related to which of the following?

- Ans
- 1. To safeguard public property and to abjure violence
 - 2. To value and preserve the rich heritage of our composite culture
 - 3. To defend the country and render national service when called upon to do so
 - 4. To uphold and protect the sovereignty, unity and integrity of India

Q.2 In which year did India host second Asian Games?

- Ans
- 1. 1978
 - 2. 1980
 - 3. 1999
 - 4. 1982

Q.3 The Cabinet Committee on Economic Affairs chaired by the Prime Minister Shri Narendra Modi approved a new Central Sector Scheme "PM Vishwakarma" in 2023 with a financial outlay of Rs.13,000 crore for a period of _____.

- Ans
- 1. ten years
 - 2. seven years
 - 3. five years
 - 4. six years

Q.4 India shares about _____ of its land border with Afghanistan.

- Ans
- 1. 306 KM
 - 2. 106 KM
 - 3. 506 KM
 - 4. 706 KM

Q.5 Sri Lanka is separated from India by a narrow channel of sea formed by the Palk Strait and the _____.

- Ans
- 1. Gulf of Strait
 - 2. Gulf of Kutch
 - 3. Gulf of Mannar
 - 4. Gulf of Khambat

Q.6 Free throw is the sport term of _____.

- Ans
- 1. Football
 - 2. Cricket
 - 3. Badminton
 - 4. Basketball

Q.7 The couple who won Padma Bhushan in 2009 for Bharatanatyam are _____.

- Ans
- 1. Krishna Ella and Suchitra Ella
 - 2. K.V. Sampath Kumar and Vidushi K.S. Jayalakshmi
 - 3. Vannadil Pudiyaevettill Dhananjayan and Shanta Dhananjayan
 - 4. Mahaboob Subhani and Kaleeshabi Mahboob

Q.8 As on June 2023, who launched the multi-lingual India Legal App, legal helpline accessible to the citizens to obtain legal assistance from their homes?

- Ans
- ✓ 1. Justice M. N. Venkatachaliah
 - ✗ 2. Justice J.S. Khehar
 - ✗ 3. Justice T.S. Thakur
 - ✗ 4. Justice H.L. Dattu

Q.9 Who has been named "Governor of the Year" for 2023 at Central Banking Awards 2023?

- Ans
- ✓ 1. Shaktikanta Das
 - ✗ 2. D. Subbarao
 - ✗ 3. Urjit Patel
 - ✗ 4. Raghuram Rajan

Q.10 On which Indian musician's life was the documentary film "Bansuri Guru" based on?

- Ans
- ✗ 1. T.H. Vinayakram
 - ✗ 2. Pandit Ravi Shankar
 - ✓ 3. Hari Prasad Chaurasia
 - ✗ 4. Pandit Shivkumar Sharma

Q.11 What is Statutory Liquidity Ratio (SLR)?

- Ans
- ✓ 1. It's the percentage of deposits that banks must keep in liquid form in the short term
 - ✗ 2. It's the interest rate at which banks borrow from the central bank
 - ✗ 3. It's the ratio of government bonds to total assets held by a bank
 - ✗ 4. It's the ratio of a bank's capital to its total assets

Q.12 Which of the following terms is NOT related with cricket?

I. Runs

II. Dribbling

- Ans
- ✗ 1. Both I and II
 - ✗ 2. Neither I nor II
 - ✗ 3. Only I
 - ✓ 4. Only II

Q.13 Which of the following state is associated with Kathak?

- Ans
- ✓ 1. Uttar Pradesh
 - ✗ 2. Kerala
 - ✗ 3. Andhra Pradesh
 - ✗ 4. Bihar

Q.14 Who among the following is the wife of Chandragupta I.

- Ans
- 1. Kumarikanya
 - 2. Kanyadevi
 - 3. Kumaradevi
 - 4. Kanyakumari

Q.15 Which of the following five-year plan of India has achieved its target growth?

- Ans
- 1. Ninth Plan
 - 2. Tenth Plan
 - 3. Eleventh Plan
 - 4. Eighth Plan

Q.16 In India, the salaries of the Supreme Court judges are determined by _____.

- Ans
- 1. President of India
 - 2. Parliament of India
 - 3. Chief Justice of India
 - 4. Prime Minister of India

Q.17 Which one is the Traditional Celebrations of Kerala?

- Ans
- 1. Nag Panchami
 - 2. Hornbill Festival
 - 3. Baisakhi
 - 4. Onam

Q.18 What is the atomic number of Helium according to the modern periodic table?

- Ans
- 1. 5
 - 2. 3
 - 3. 2
 - 4. 4

Q.19 Who among the following addressed World Parliament of Religions at Chicago in 1893?

- Ans
- 1. Swami Vivekananda
 - 2. Ishwarchandra Vidyasagar
 - 3. Swami Dayanand Saraswati
 - 4. Raja Rammohun Roy

Q.20 A fall in the bank rate can _____ the money supply.

- Ans
- 1. decrease
 - 2. not impact
 - 3. equalize
 - 4. increase

Section : Part-C-Elementary Mathematics

Q.1 The average salary of a company's eight employees is \$6000 per year. If the average salary of the first 4 employees is \$5500 and the average salary of the next 2 employees is \$7000, what is the average salary of the remaining 2 employees to maintain the company's average salary?

- Ans
- 1. \$5500
 - 2. \$6000
 - 3. \$4200
 - 4. \$7300

Q.2 Shyam can complete $\frac{3}{5}$ part of a work in 10 days. Rakhi is 1.5 times as efficient as Shyam. In how many days will Rakhi alone complete the same work?

- Ans
- 1. 18 days
 - 2. 22 days
 - 3. $\frac{100}{9}$ days
 - 4. 20 days

Q.3 The marked price of a shirt is twice of the cost price. To earn a gain of 20 percent, what should be the discount percentage?

- Ans
- 1. 40 percent
 - 2. 37 percent
 - 3. 47 percent
 - 4. 45 percent

Q.4 If Raman travels with 30 percent speed of its usual speed, then he will reach 15 minutes late. What is the usual time taken by him?

- Ans
- 1. 28 minutes
 - 2. 42 minutes
 - 3. 21 minutes
 - 4. 35 minutes

Q.5 What is the value of $\frac{625}{125}$ of $\frac{45}{225} + \frac{256}{64} \div \frac{56}{196}$?

- Ans
- 1. 15
 - 2. 14
 - 3. 16
 - 4. 17

Q.6 A number increased by 28% gives 320 as a result. Find the number.

- Ans
- 1. 250
 - 2. 240
 - 3. 220
 - 4. 280

Q.7 The average of five consecutive odd numbers is 21. What is the largest number out of these five numbers?

- Ans
- 1. 27
 - 2. 31
 - 3. 25
 - 4. 29

Q.8 The difference between simple interest on a certain sum at the annual rate of 12 percent for $(\frac{3}{2})$ years and $(\frac{7}{2})$ years is Rs. 1920. What is the sum?

- Ans
- 1. Rs. 6000
 - 2. Rs. 14000
 - 3. Rs. 8000
 - 4. Rs. 12000

Q.9 Anil donates 30 percent of his income to a school and deposits 70 percent of the remainder in his bank. If he has Rs. 9765 now, then what is the income of Anil?

- Ans
- 1. Rs. 45600
 - 2. Rs. 45500
 - 3. Rs. 46000
 - 4. Rs. 46500

Q.10 The length of the longest rod that can be placed in a cubical room is $8\sqrt{3}$ cm. What is the volume of the cube?

- Ans
- 1. 1728 cm^3
 - 2. 216 cm^3
 - 3. 512 cm^3
 - 4. 64 cm^3

Q.11 Tom and Jerry can paint a house together in 9 days. If Tom alone can paint the same house in 15 days, how long will it take for Jerry to paint the house alone?

- Ans
- 1. $\frac{45}{2}$ days
 - 2. $\frac{45}{7}$ days
 - 3. $\frac{41}{3}$ days
 - 4. $\frac{41}{5}$ days

Q.12 A table is purchased for Rs. 8500 and sold for Rs. 8000. What is the loss percentage?

- Ans
- 1. 5.88 percent
 - 2. 10 percent
 - 3. 5 percent
 - 4. 7.5 percent

Q.13 Rs. 17000 is lent at compound interest at an annual rate of 22 percent for 1 year (compounding annually). If the compounding of interest is done half yearly, then how much more interest will be obtained?

- Ans
- 1. Rs. 210.8
 - 2. Rs. 205.7
 - 3. Rs. 204.4
 - 4. Rs. 208.8

Q.14 Simplify: $30 \div (2 \times 3) + 2$.

- Ans
- 1. 6
 - 2. 4
 - 3. 8
 - 4. 7

Q.15 If $p : q = 6 : 5$, then what is the value of $(6p + 5q) : (6p - 5q)$?

- Ans
- 1. 45 : 16
 - 2. 35 : 7
 - 3. 81 : 7
 - 4. 61 : 11

Q.16 An electric wire of 60 meters is cut into equal segments of 5 meters each. Calculate the number of segments.

- Ans
- 1. 8
 - 2. 10
 - 3. 12
 - 4. 6

Q.17 Last year Neil bought two watches. This year he sold them for ₹ 15,000 each. On one, he made a 25% profit and on the other, he had a $x\%$ loss. If his net loss is ₹ 2000, then find the value of x .

- Ans
- 1. 50
 - 2. 40
 - 3. 25
 - 4. 80

Q.18 If Marked price of an article is Rs. 2500 and selling price is Rs. 2000. What is the discount percentage?

- Ans
- 1. 10
 - 2. 25
 - 3. 15
 - 4. 20

Q.19 What is the value of $25 \times 4 - 22 \div 11 \times 7 + 4 \times 3$?

- Ans
- 1. 98
 - 2. 88
 - 3. 92
 - 4. 96

Q.20 If $x = (3/8)y$ and $y = (3/4)z$, then what is the value of $x : y : z$?

- Ans
- 1. 9 : 25 : 31
 - 2. 9 : 24 : 34
 - 3. 9 : 24 : 32
 - 4. 9 : 8 : 31

Section : Part-D-English

Q.1 Choose the idiom/phrase that can substitute the highlighted group of words meaningfully.

To abandon your friends now would be a **break of confidence**.

- Ans
- 1. In the dark
 - 2. Spill the beans
 - 3. Off on the wrong foot
 - 4. Breach of faith

Q.2 Choose the most appropriate synonym of the underlined word.

We were disillusioned when we saw how the movie star acted in real life.

- Ans
- 1. Disenchanted
 - 2. Deluded
 - 3. Fooled
 - 4. Misrepresented

Q.3 Find the part of the given sentence that has an error in it. If there is no error, choose 'No error'.

Sonam is current reading the books I gave her for her birthday.

- Ans
- 1. No error
 - 2. her for her birthday.
 - 3. the books I gave
 - 4. Sonam is current reading

Q.4 Choose the most appropriate antonym of the underlined word

Mustafa then proceeded to enumerate five factors that he believed are contributing to the prevailing despair.

- Ans
- 1. Guess
 - 2. Detail
 - 3. Specify
 - 4. Calculate

Q.5 Select the sentence with no spelling errors.

Ans 1.

By virtue of being readers we are also writers, I now believe, but that was not always the case.

2.

By vertue of being readers we are also writers, I now believe, but that was not always the case.

3.

By virtue of being readers we are also rriters, I now believe, but that was not always the case.

4.

By virtue of being readers we are also writers, I now beleive, but that was not always the case.

Q.6 Select the most appropriate word to fill in the blank.

It is well known that the company is _____ against older workers and refuses to hire anyone over the age of 50.

Ans 1. prejudiced

2. prejudicing

3. prejudices

4. prejudice

Q.7 Improve the underlined part of the sentence. Choose 'No improvement' as an answer if the sentence is grammatically correct.

The hippopotamus is a mildly and peace-loving animal.

Ans 1. a milder and

2. a mild and

3. No improvement

4. the mildest or

Q.8 Select the incorrectly spelt word from the given sentence.

He added that time has come when responsibility should be fised for such incidents.

Ans 1. responsibility

2. added

3. fised

4. incidents

Q.9 Fill in the blank with the most appropriate option.

That's is the _____ man I was telling you about, he was the one following me.

Ans 1. bawled

2. balled

3. bald

4. bailed

Q.10 Select the most appropriate option for the given blank.

Don't _____ faith, everything will be all right.

- Ans
- 1. lose
 - 2. loose
 - 3. raises
 - 4. give

Q.11 Find the part of the given sentence that has an error in it. If there is no error, choose 'No error'.

Previous studies of both animal models and humans, have find that involuntary muscle contractions in utero send signals to the cortex.

- Ans
- 1. contractions in utero send signals to the cortex.
 - 2. have find that involuntary muscle
 - 3. No error
 - 4. Previous studies of both animal models and humans,

Q.12 Select the most appropriate word to fill in the blank.

Loud fireworks also have an _____ on glaciers.

- Ans
- 1. effect
 - 2. affects
 - 3. effecting
 - 4. affect

Q.13 The sentence has been divided into three parts, identify the error segment in the sentence given below. Choose no error if there is no error in the sentence.

After they had eaten a delicious homemade dinner,/ the family gathered around the fireplace/ to share stories and laughter.

- Ans
- 1. After they had eaten a delicious homemade dinner,
 - 2. to share stories and laughter.
 - 3. the family gathered around the fireplace
 - 4. no error

Q.14 Fill in the blank with the most appropriate option.

I fear she is fretting about something, I wish I could _____ what it is.

- Ans
- 1. query
 - 2. find out
 - 3. investigate
 - 4. fall out

Q.15 In the following question, out of the given four alternatives, select the alternative which best expresses the meaning of the Idiom/Phrase.

To pull somebody's leg

- Ans**
- 1. To bear your expenses
 - 2. To bring no harm
 - 3. To make fun of somebody
 - 4. To refrain someone from working

Comprehension:

Read the passage carefully and select the correct answer for the given blanks out of the four alternatives.

The different elephants' diets have very different impacts (1) _____ their surroundings, which have been studied. African elephants can be quite destructive, as their (2) _____ for saplings can leave a barren land behind. Asian elephants have been deemed "daintier eaters," as they leave less of an impact by (3) _____ fewer tree scars. Instead, they clear away more palms and grass. Elephants in captivity will likely be fed a diet that (4) _____ some of the same foods that of a wild elephant. However, they often are also fed hay. An adult elephant can (5) _____ 4-5 bales of hay each day, which is 4.5-8kg or 10-18lbs.

SubQuestion No : 16

Q.16 Select the most appropriate option for blank(1)

- Ans**
- 1. at
 - 2. over
 - 3. on
 - 4. in

Comprehension:

Read the passage carefully and select the correct answer for the given blanks out of the four alternatives.

The different elephants' diets have very different impacts (1) _____ their surroundings, which have been studied. African elephants can be quite destructive, as their (2) _____ for saplings can leave a barren land behind. Asian elephants have been deemed "daintier eaters," as they leave less of an impact by (3) _____ fewer tree scars. Instead, they clear away more palms and grass. Elephants in captivity will likely be fed a diet that (4) _____ some of the same foods that of a wild elephant. However, they often are also fed hay. An adult elephant can (5) _____ 4-5 bales of hay each day, which is 4.5-8kg or 10-18lbs.

SubQuestion No : 17

Q.17 Select the most appropriate option for blank(2)

- Ans**
- 1. prudence
 - 2. inclusiveness
 - 3. proximity
 - 4. preference

Comprehension:

Read the passage carefully and select the correct answer for the given blanks out of the four alternatives.

The different elephants' diets have very different impacts (1)_____ their surroundings, which have been studied. African elephants can be quite destructive, as their (2)_____ for saplings can leave a barren land behind. Asian elephants have been deemed "daintier eaters," as they leave less of an impact by (3)_____ fewer tree scars. Instead, they clear away more palms and grass. Elephants in captivity will likely be fed a diet that (4)_____ some of the same foods that of a wild elephant. However, they often are also fed hay. An adult elephant can (5)_____ 4-5 bales of hay each day, which is 4.5-8kg or 10-18lbs.

SubQuestion No : 18

Q.18 Select the most appropriate option for blank(3)

- Ans
- 1. sledging
 - 2. siding
 - 3. leaving
 - 4. hiding

Comprehension:

Read the passage carefully and select the correct answer for the given blanks out of the four alternatives.

The different elephants' diets have very different impacts (1)_____ their surroundings, which have been studied. African elephants can be quite destructive, as their (2)_____ for saplings can leave a barren land behind. Asian elephants have been deemed "daintier eaters," as they leave less of an impact by (3)_____ fewer tree scars. Instead, they clear away more palms and grass. Elephants in captivity will likely be fed a diet that (4)_____ some of the same foods that of a wild elephant. However, they often are also fed hay. An adult elephant can (5)_____ 4-5 bales of hay each day, which is 4.5-8kg or 10-18lbs.

SubQuestion No : 19

Q.19 Select the most appropriate option for blank(4)

- Ans
- 1. includes
 - 2. subjugates
 - 3. invites
 - 4. attracts

Comprehension:

Read the passage carefully and select the correct answer for the given blanks out of the four alternatives.

The different elephants' diets have very different impacts (1)_____ their surroundings, which have been studied. African elephants can be quite destructive, as their (2)_____ for saplings can leave a barren land behind. Asian elephants have been deemed "daintier eaters," as they leave less of an impact by (3)_____ fewer tree scars. Instead, they clear away more palms and grass. Elephants in captivity will likely be fed a diet that (4)_____ some of the same foods that of a wild elephant. However, they often are also fed hay. An adult elephant can (5)_____ 4-5 bales of hay each day, which is 4.5-8kg or 10-18lbs.

SubQuestion No : 20

Q.20 Select the most appropriate option for blank(5)

- Ans
- ✓ 1. eat
 - ✗ 2. sell
 - ✗ 3. levy
 - ✗ 4. bail

Section : Part-D-Hindi

Q.1 दिए गए शब्द का पर्यायवाची ज्ञात कीजिए।

चाँदनी

- Ans
- ✓ 1. ज्योत्स्ना
 - ✗ 2. लक्षण
 - ✗ 3. रोटी
 - ✗ 4. संकोच

Q.2 दिए गए वाक्य का वह भाग ज्ञात करें, जिसमें कोई त्रुटि है।

ईश्वर के अनेकों रूप है जिसे मानव नहीं जानता।

- Ans
- ✗ 1. रूप है
 - ✓ 2. ईश्वर के अनेकों
 - ✗ 3. जिसे मानव
 - ✗ 4. नहीं जानता।

Q.3 निम्नलिखित प्रश्न में, दिए गए चार विकल्पों में से, उस विकल्प का चयन करें जो दिए गए मुहावरे के अर्थ को सर्वश्रेष्ठ रूप से व्यक्त करता है।

टाट उलटना

- Ans
- ✓ 1. दिवाला निकलना
 - ✗ 2. किसी को दुखी करना
 - ✗ 3. गलत काम करना
 - ✗ 4. बैठे हुए को गिराना

Q.4 दिए गए वाक्य में रेखांकित शब्द का तद्भव शब्द ज्ञात कीजिए।

रोटी का अर्ध हिस्सा दिजिए।

- Ans
- ✗ 1. अधिकार
 - ✓ 2. आधा
 - ✗ 3. आता
 - ✗ 4. आज

Q.5 दिए गए विकल्पों में से शुद्ध वर्तनी ज्ञात कीजिए।

- Ans
- ✓ 1. भारत का राष्ट्रीय वाक्य 'सत्यमेव जयते' है।
 - ✗ 2. भारत का राष्ट्रय वाक्य 'सत्यमेव जयते' है।
 - ✗ 3. भारत का राष्ट्रिया वाक्य 'सत्यमेव जयते' है।
 - ✗ 4. भारत का राष्ट्रिय वाक्य 'सत्यमेव जयते' है।

Q.6 निम्नलिखित प्रश्न में, चार विकल्पों में से, उस विकल्प का चयन करें जो कोष्ठक में दिए गए शब्द के विलोम शब्द का सही विकल्प है।

मेरा मन बहुत ही (चंचल) _____ सा है।

- Ans
- ✗ 1. गर्व
 - ✓ 2. एकाग्र
 - ✗ 3. कोमल
 - ✗ 4. कठोर

Q.7 दिए गए वाक्य में से गलत वर्तनी ज्ञात कीजिए।

राम तो एक सीधा-साधा बच्चा है।

- Ans
- ✗ 1. सीधा
 - ✓ 2. सीधा-साधा
 - ✗ 3. एक
 - ✗ 4. बच्चा

Q.8 निम्नलिखित प्रश्न में, दिए गए चार विकल्पों में से, उस विकल्प का चयन करें जो दिए गए मुहावरे के अर्थ को सर्वश्रेष्ठ रूप से व्यक्त करता है।

औंधे मुँह गिरना

- Ans
- ✗ 1. भेद प्रकट करना
 - ✗ 2. अनिष्ट की कामना करना
 - ✗ 3. सर्वस्व नष्ट होना
 - ✓ 4. पराजित होना

Q.9 निम्नलिखित प्रश्न में, चार विकल्पों में से, उस सही विकल्प का चयन करें जो वाक्यांशों के लिए एक शब्द का विकल्प हो।

जिसे प्राप्त न किया जा सके

- Ans
- ✗ 1. अग्राह्य
 - ✓ 2. अप्राप्य
 - ✗ 3. असाध्य
 - ✗ 4. अनिवार्य

Q.10 निम्नलिखित प्रश्न में, चार विकल्पों में से, उस विकल्प का चयन करें जो कोष्ठक में दिए गए शब्द के पर्यायवाची शब्द का सही विकल्प नहीं है।

यह महाविद्यालय बहुत ही अच्छा है। यहाँ एक भर्ती पाने के लिए 5,000 से भी ज्यादा बच्चे (आवेदन) _____ करते हैं।

- Ans
- ✗ 1. प्रार्थना
 - ✗ 2. निवेदन
 - ✓ 3. आगाज़
 - ✗ 4. याचना

Q.11 दिए गए वाक्य में रेखांकित शब्द का तत्सम शब्द ज्ञात कीजिए।

रमेश घर जा रहा है।

- Ans
- ✓ 1. गृह
 - ✗ 2. गहन
 - ✗ 3. घटिका
 - ✗ 4. घट

Q.12 निम्नलिखित प्रश्न में, चार विकल्पों में से, उस विकल्प का चयन करें जो कोष्ठक में दिए गए शब्द के विलोम शब्द का सही विकल्प है।

किसी भी कार्य को (निश्चल) _____ होकर पूर्ण करना चाहिए तभी वह सफल होता है।

- Ans
- ✗ 1. धीर
 - ✗ 2. अधीर
 - ✗ 3. कृष
 - ✓ 4. छली

Q.13 दिए गए वाक्यांश के लिए सार्थक शब्द ज्ञात कीजिए।

जो सुना हुआ न हो

- Ans
- ✗ 1. अध्वनित
 - ✗ 2. श्रव्य
 - ✗ 3. अन्यमनस्क
 - ✓ 4. अश्रव्य

Q.14 निम्नलिखित प्रश्न में, चार विकल्पों में से, उस विकल्प का चयन करें जो रिक्त स्थान के लिए सही शब्द वाला विकल्प हो।

भारत प्राचीनतम संस्कृति का देश है जहाँ दान-पुण्य को _____ का अनिवार्य अंग माना गया है।

- Ans
- ✗ 1. लोगों
 - ✓ 2. जीवनमुक्ति
 - ✗ 3. सबका
 - ✗ 4. अनचाहा

Q.15 दिए गए विकल्पों में से तीन विकल्प त्रुटियुक्त हैं, जबकि एक सही है। उस सही विकल्प का चयन करें।

- Ans
- ✗ 1. तेरे को कौन चाहिए?
 - ✗ 2. तेरे को कौन चाही?
 - ✗ 3. तेरे को क्या चाहिए?
 - ✓ 4. तुम्हें क्या चाहिए?

Comprehension:

नीचे दिए गए गद्य में कुछ शब्द छोड़ दिए गए हैं और प्रत्येक रिक्त स्थान के चार विकल्प दिए गए हैं। इन चारों में से कौन सा विकल्प रिक्त स्थान की पूर्ति करेगा-

(1) _____ में रीढ़ की हड्डी की जो भूमिका है, वही संसद में (2) _____ की है। संसद का ढांचा महिलाओं पर (3) _____ है। भारत दुनिया की पांचवी बड़ी अर्थव्यवस्था बन गया है, लेकिन भारतीय अर्थव्यवस्था का (4) _____ मुख्य तौर पर महिलाओं से ही (5) _____ है।

SubQuestion No : 16

Q.16 रिक्त 1 के लिए सबसे उपयुक्त विकल्प का चयन कीजिए।

- Ans
- ✗ 1. किताब
 - ✗ 2. संसद
 - ✗ 3. देश
 - ✓ 4. शरीर

Comprehension:

नीचे दिए गए गद्य में कुछ शब्द छोड़ दिए गए हैं और प्रत्येक रिक्त स्थान के चार विकल्प दिए गए हैं। इन चारों में से कौन सा विकल्प रिक्त स्थान की पूर्ति करेगा-

(1)_____ में रीढ़ की हड्डी की जो भूमिका है, वही संसद में (2)_____ की है। संसद का ढांचा महिलाओं पर (3)_____ है। भारत दुनिया की पांचवी बड़ी अर्थव्यवस्था बन गया है, लेकिन भारतीय अर्थव्यवस्था का (4)_____ मुख्य तौर पर महिलाओं से ही (5)_____ है।

SubQuestion No : 17

Q.17 रिक्त 2 के लिए सबसे उपयुक्त विकल्प का चयन कीजिए।

- Ans
- 1. अखबार
 - 2. जूतों
 - 3. महिलाओं
 - 4. फोन

Comprehension:

नीचे दिए गए गद्य में कुछ शब्द छोड़ दिए गए हैं और प्रत्येक रिक्त स्थान के चार विकल्प दिए गए हैं। इन चारों में से कौन सा विकल्प रिक्त स्थान की पूर्ति करेगा-

(1)_____ में रीढ़ की हड्डी की जो भूमिका है, वही संसद में (2)_____ की है। संसद का ढांचा महिलाओं पर (3)_____ है। भारत दुनिया की पांचवी बड़ी अर्थव्यवस्था बन गया है, लेकिन भारतीय अर्थव्यवस्था का (4)_____ मुख्य तौर पर महिलाओं से ही (5)_____ है।

SubQuestion No : 18

Q.18 रिक्त 3 के लिए सबसे उपयुक्त विकल्प का चयन कीजिए।

- Ans
- 1. विषय
 - 2. निर्भर
 - 3. मौका
 - 4. ऊपर

Comprehension:

नीचे दिए गए गद्य में कुछ शब्द छोड़ दिए गए हैं और प्रत्येक रिक्त स्थान के चार विकल्प दिए गए हैं। इन चारों में से कौन सा विकल्प रिक्त स्थान की पूर्ति करेगा-

(1)_____ में रीढ़ की हड्डी की जो भूमिका है, वही संसद में (2)_____ की है। संसद का ढांचा महिलाओं पर (3)_____ है। भारत दुनिया की पांचवी बड़ी अर्थव्यवस्था बन गया है, लेकिन भारतीय अर्थव्यवस्था का (4)_____ मुख्य तौर पर महिलाओं से ही (5)_____ है।

SubQuestion No : 19

Q.19 रिक्त 4 के लिए सबसे उपयुक्त विकल्प का चयन कीजिए।

- Ans
- 1. उपस्थित
 - 2. नीचता
 - 3. विकास
 - 4. ऊँचाई

Comprehension:

नीचे दिए गए गद्य में कुछ शब्द छोड़ दिए गए हैं और प्रत्येक रिक्त स्थान के चार विकल्प दिए गए हैं। इन चारों में से कौन सा विकल्प रिक्त स्थान की पूर्ति करेगा-

(1)_____ में रीढ़ की हड्डी की जो भूमिका है, वही संसद में (2)_____ की है। संसद का ढांचा महिलाओं पर (3)_____ है। भारत दुनिया की पांचवी बड़ी अर्थव्यवस्था बन गया है, लेकिन भारतीय अर्थव्यवस्था का (4)_____ मुख्य तौर पर महिलाओं से ही (5)_____ है।

SubQuestion No : 20

Q.20

रिक्त 5 के लिए सबसे उपयुक्त विकल्प का चयन कीजिए।

Ans

✗ 1. ऊपर

✗ 2. भूमिक

✓ 3. संचालित

✗ 4. नीचे

