

Sub Inspector in Delhi Police and Central Armed Police Forces Examination 2023 Paper I

Roll Number	
Candidate Name	
Venue Name	
Exam Date	04/10/2023
Exam Time	12:30 PM - 2:30 PM
Subject	SICPO Paper I 2023


Section : General Intelligence and Reasoning

Q.1 Select the option figure in which the given figure is embedded as its part (rotation is NOT allowed).



Ans

✗ 1.



✓ 2.



✗ 3.



✗ 4.



Question ID : 264330117425

Option 1 ID : 264330461742

Option 2 ID : 264330461744

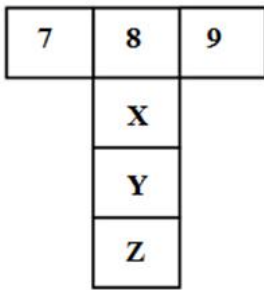
Option 3 ID : 264330461743

Option 4 ID : 264330461741

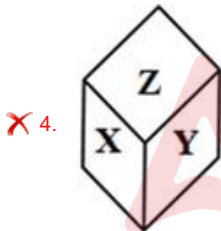
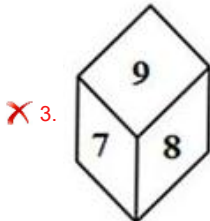
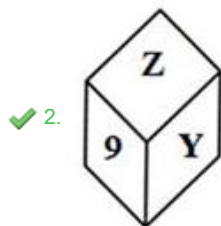
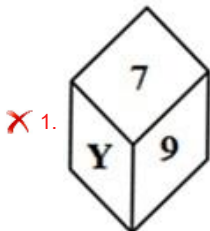
Status : Answered

Chosen Option : 2

Q.2 If the given sheet is folded to form a cube, which of the following figures is possible?



Ans



Question ID : 26433059911

Option 1 ID : 264330234478

Option 2 ID : 264330234479

Option 3 ID : 264330234476

Option 4 ID : 264330234477

Status : Answered

Chosen Option : 2

Q.3 Which letter-cluster will replace the question mark (?) to complete the given series?
AXFN, GCJQ, MHNT, ?, YRVZ

- Ans
- 1. SWMR
 - 2. QRLV
 - 3. RLQV
 - 4. SMRW

Question ID : 2643307666
Option 1 ID : 264330300729
Option 2 ID : 264330300728
Option 3 ID : 264330300730
Option 4 ID : 264330300731
Status : Answered
Chosen Option : 4

Q.4 'F \$ G' means 'F is the mother of G'.
'F # G' means 'F is the father of G'.
'F @ G' means 'F is the husband of G'.
'F % G' means 'F is the daughter of G'.
If J @ C \$ B # R, then how is J related to R?

- Ans
- 1. Mother's brother
 - 2. Father
 - 3. Father's sister
 - 4. Father's father

Question ID : 264330145392
Option 1 ID : 264330569823
Option 2 ID : 264330569825
Option 3 ID : 264330569826
Option 4 ID : 264330569824
Status : Answered
Chosen Option : 4

Q.5 In a certain code language, 'SUGAR' is coded as 81 and 'FILL' is coded as 51. How will
'CREAM' be coded in that language?

- Ans
- 1. 52
 - 2. 60
 - 3. 57
 - 4. 55

Question ID : 26433074709
Option 1 ID : 264330292924
Option 2 ID : 264330292927
Option 3 ID : 264330292926
Option 4 ID : 264330292925
Status : Answered
Chosen Option : 4

Q.6 Select the set in which the numbers are related in the same way as are the numbers of the following sets.

(NOTE : Operations should be performed on the whole numbers, without breaking down the numbers into its constituent digits. E.g. 13- Operations on 13 such as adding/subtracting/multiplying etc. to 13 can be performed. Breaking down 13 into 1 and 3 and then performing mathematical operations on 1 and 3 is not allowed.)

(7, 2, 70)
(6, 4, 120)

- Ans 1. (3, 8, 120)
 2. (13, 4, 208)
 3. (5, 9, 270)
 4. (11, 6, 143)

Question ID : 26433057454
Option 1 ID : 264330224801
Option 2 ID : 264330224803
Option 3 ID : 264330224800
Option 4 ID : 264330224802

Status : Answered
Chosen Option : 1

Q.7 Select the option that is related to the third term in the same way as the second term is related to the first term and the sixth term is related to the fifth term.

16 : 106 :: 11 : ? :: 10 : 22

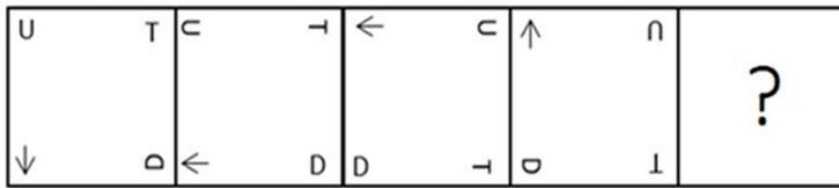
- Ans 1. 36
 2. 42
 3. 40
 4. 31

Question ID : 26433079160
Option 1 ID : 264330310646
Option 2 ID : 264330310644
Option 3 ID : 264330310645
Option 4 ID : 264330310647

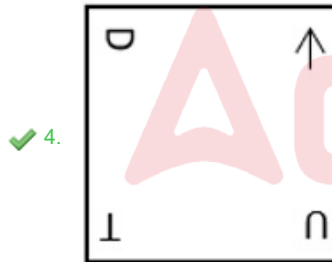
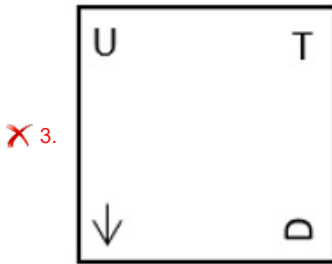
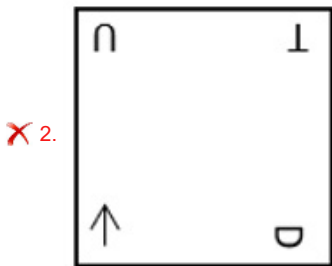
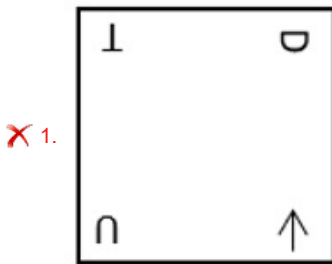
Status : Not Attempted and Marked For Review
Chosen Option : --

Adda247

Q.8 Which figure from the given options would replace the question mark (?) if the following figure series were to be continued?



Ans



Question ID : 264330145479

Option 1 ID : 264330570173

Option 2 ID : 264330570171

Option 3 ID : 264330570172

Option 4 ID : 264330570174

Status : Answered

Chosen Option : 4

Q.9 Which letter-cluster will replace the question mark (?) to complete the given series?
PJVG, VBZB, BTDW, HLHR, ?

- Ans 1. NDLN
 2. MDLN
 3. MDLM
 4. NDLM

Question ID : 26433040789

Option 1 ID : 264330159633

Option 2 ID : 264330159631

Option 3 ID : 264330159632

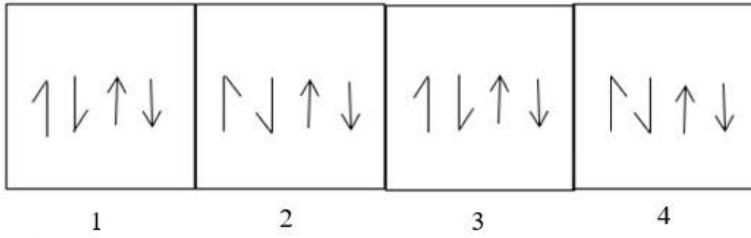
Option 4 ID : 264330159634

Status : Answered

Chosen Option : 4

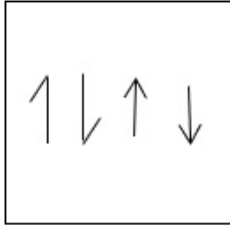


Q.10 Which of the given figures when placed in the 5th position would continue the series that is established by the first four figures?

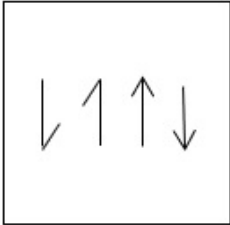


Ans

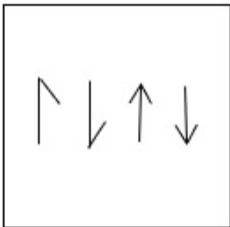
✓ 1.



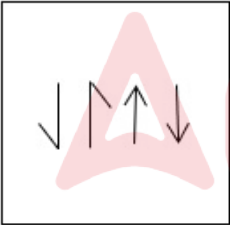
✗ 2.



✗ 3.



✗ 4.



Question ID : 26433087305

Option 1 ID : 264330342858

Option 2 ID : 264330342860

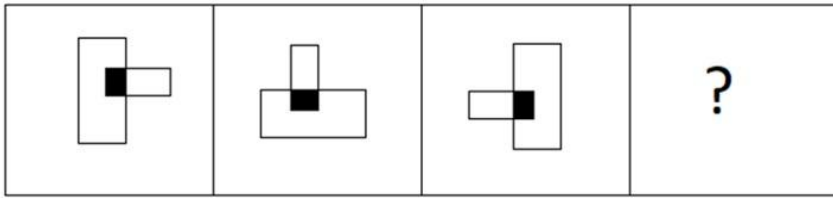
Option 3 ID : 264330342857

Option 4 ID : 264330342859

Status : Answered

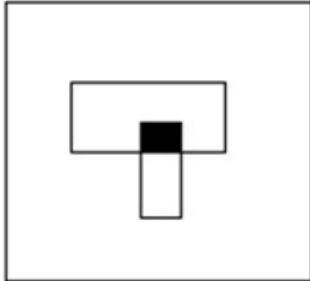
Chosen Option : 1

Q.11 Select the figure that will come next in the following figure series.

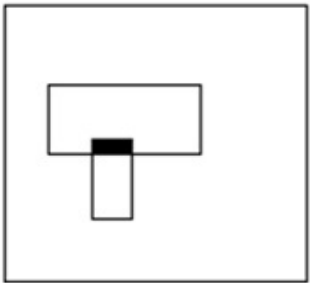


Ans

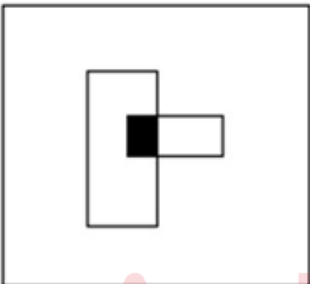
✓ 1.



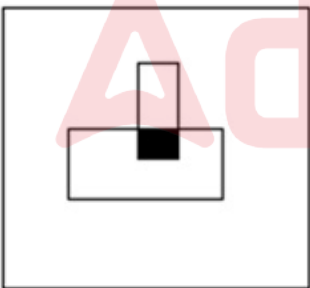
✗ 2.



✗ 3.



✗ 4.



Question ID : 26433087070
Option 1 ID : 264330341924
Option 2 ID : 264330341922
Option 3 ID : 264330341923
Option 4 ID : 264330341921
Status : Answered
Chosen Option : 1

Q.12 Select the correct option that indicates the arrangement of the given words in the order in which they appear in an English dictionary.

1. Doctor
2. Doctorate
3. Docile
4. Documentary
5. Dock
6. Doctrine

Ans 1. 3, 5, 1, 2, 6, 4
 2. 3, 5, 1, 6, 2, 4
 3. 3, 5, 2, 1, 6, 4
 4. 3, 4, 5, 1, 2, 6,

Question ID : 264330145375

Option 1 ID : 264330569755

Option 2 ID : 264330569758

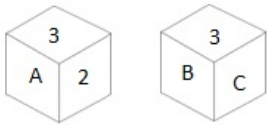
Option 3 ID : 264330569757

Option 4 ID : 264330569756

Status : Answered

Chosen Option : 3

Q.13 Six characters A, B, C, 1, 2 and 3 are written on different faces of a dice. Two positions of this dice are shown in the figure. Find the character on the face opposite to A.



Ans 1. C
 2. 2
 3. B
 4. 1

Question ID : 264330109200

Option 1 ID : 264330429079

Option 2 ID : 264330429080

Option 3 ID : 264330429078

Option 4 ID : 264330429077

Status : Answered

Chosen Option : 3

Q.14 Which of the following numbers will replace the question mark (?) in the given series?

$\frac{1}{121}, \frac{1}{11}, 1, ?, 121$

Ans 1. 11
 2. 12
 3. 21
 4. 1

Question ID : 26433092491

Option 1 ID : 264330363254

Option 2 ID : 264330363256

Option 3 ID : 264330363255

Option 4 ID : 264330363253

Status : Answered

Chosen Option : 1

Q.15 Two statements are given, followed by two conclusions numbered I and II. Assuming the statements to be true, even if they seem to be at variance with commonly known facts, decide which of the conclusions logically follow(s) from the statements.

Statements:

Some movies are dramas.
Some dramas are fiction.

Conclusions:

I. Some movies are fiction.
II. All fiction are movies.

- Ans
- 1. Only conclusion I follows
 - 2. Only conclusion II follows
 - 3. Neither conclusion I nor II follows
 - 4. Both conclusions I and II follow

Question ID : 26433056712

Option 1 ID : 264330221832

Option 2 ID : 264330221833

Option 3 ID : 264330221835

Option 4 ID : 264330221834

Status : Answered

Chosen Option : 3

Q.16 If A denotes '+', B denotes 'x', C denotes '-', and D denotes '÷', then what will be the value of the following equation?
22 B 7 C 288 D 12 A 27 = ?

- Ans
- 1. 160
 - 2. 103
 - 3. 130
 - 4. 157

Question ID : 264330129782

Option 1 ID : 264330508362

Option 2 ID : 264330508359

Option 3 ID : 264330508360

Option 4 ID : 264330508361

Status : Answered

Chosen Option : 4

Q.17 Select the option that is related to the fourth term in the same way as the first term is related to the second term and the fifth term is related to the sixth term.
12 : 64 :: ? : 116 :: 32 : 144

- Ans
- 1. 25
 - 2. 46
 - 3. 35
 - 4. 14

Question ID : 26433079359

Option 1 ID : 264330311427

Option 2 ID : 264330311426

Option 3 ID : 264330311425

Option 4 ID : 264330311424

Status : Not Attempted and Marked For Review

Chosen Option : --

Q.18 If A denotes '+', B denotes 'x', C denotes '-', and D denotes '÷', then what will be the value of the following equation?
21 B 14 C 154 D 14 A 42 = ?

- Ans 1. 357
 2. 325
 3. 342
 4. 352

Question ID : 264330129786
Option 1 ID : 264330508377
Option 2 ID : 264330508376
Option 3 ID : 264330508375
Option 4 ID : 264330508378
Status : Answered
Chosen Option : 2

Q.19 If A denotes '+', B denotes 'x', C denotes '-', and D denotes '÷', then what will come in place of '?' in the following equation?
56 D 8 B 7 = ? B 7

- Ans 1. 9
 2. 7
 3. 8
 4. 12

Question ID : 26433067665
Option 1 ID : 264330265175
Option 2 ID : 264330265174
Option 3 ID : 264330265172
Option 4 ID : 264330265173
Status : Answered
Chosen Option : 2

Q.20 Aunt Gloria walked out of her house and walked 65 m towards the east. She took a left turn and walked 28 m. Again, she took a left turn and walked 110 m to reach a public library. How far (shortest distance) and in which direction is the library from Aunt Gloria's house?

- Ans 1. 48 m, North-East
 2. 48 m, North-West
 3. 53 m, North-East
 4. 53 m, North-West

Question ID : 26433057306
Option 1 ID : 264330224211
Option 2 ID : 264330224209
Option 3 ID : 264330224208
Option 4 ID : 264330224210
Status : Not Attempted and Marked For Review
Chosen Option : --

Q.21 Select the set in which the numbers are related in the same way as are the numbers of the following set.

(NOTE : Operations should be performed on the whole numbers, without breaking down the numbers into its constituent digits. E.g. 13 – Operations on 13 such as adding /subtracting/ multiplying etc. to 13 can be performed. Breaking down 13 into 1 and 3 and then performing mathematical operations on 1 and 3 is NOT allowed)

(9, 1, 19)
(5, 2, 14)

- Ans 1. (3,5,56)
 2. (3,2,10)
 3. (2,5,12)
 4. (4,7,37)

Question ID : 264330145321

Option 1 ID : 264330569539

Option 2 ID : 264330569541

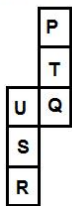
Option 3 ID : 264330569542

Option 4 ID : 264330569540

Status : Not Attempted and Marked For Review

Chosen Option : --

Q.22 A cube is made by folding the given sheet. In the cube so formed, which pair of letters will be on the opposite faces?



- Ans 1. T and S
 2. R and P
 3. P and U
 4. U and T

Question ID : 26433065669

Option 1 ID : 264330257238

Option 2 ID : 264330257239

Option 3 ID : 264330257236

Option 4 ID : 264330257237

Status : Answered

Chosen Option : 1

Q.23 A @ B means 'A is the husband of B'
A & B means 'A is the mother of B'
A # B means 'A is the daughter of B'
If Z # L @ P & K @ J # X, then how is K related to Z?

- Ans 1. Brother
 2. Sister
 3. Mother
 4. Brother' wife

Question ID : 264330126025

Option 1 ID : 264330493774

Option 2 ID : 264330493772

Option 3 ID : 264330493775

Option 4 ID : 264330493773

Status : Answered

Chosen Option : 1

Q.24 In a certain code language, 'ALIVE' is coded as 64 and 'HALL' is coded as 45. How will 'MOVIE' be coded in that language?

- Ans
- 1. 71
 - 2. 80
 - 3. 79
 - 4. 58

Question ID : 26433074710
Option 1 ID : 264330292929
Option 2 ID : 264330292928
Option 3 ID : 264330292930
Option 4 ID : 264330292931
Status : Answered
Chosen Option : 3

Q.25 Six students Prateek, Sameer, Kabir, Ziya, Joseph, Kiran are sitting around a circular table facing the centre (not necessarily in the same order). Prateek is an immediate neighbour of both Sameer and Kabir. Ziya is sitting second to the right of Sameer. Kiran is sitting third to the left of Kabir. Joseph is an immediate neighbour of both Ziya and Kabir.

Who is an immediate neighbour of Ziya?

- Ans
- 1. Prateek
 - 2. Kabir
 - 3. Sameer
 - 4. Kiran

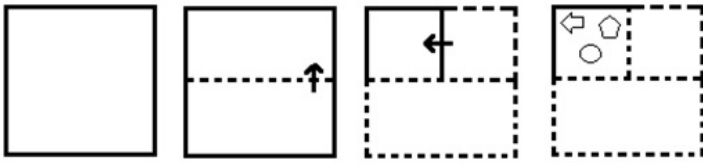
Question ID : 26433082279
Option 1 ID : 264330322950
Option 2 ID : 264330322949
Option 3 ID : 264330322952
Option 4 ID : 264330322951
Status : Answered
Chosen Option : 4

Q.26 If A denotes '+', B denotes '×', C denotes '−', and D denotes '÷', then what will be the value of the following expression?
89 A 94 C 35 D 8 B 8 = ?

- Ans
- 1. 148
 - 2. 189
 - 3. 169
 - 4. 135

Question ID : 26433085363
Option 1 ID : 264330335156
Option 2 ID : 264330335154
Option 3 ID : 264330335153
Option 4 ID : 264330335155
Status : Answered
Chosen Option : 1

Q.27 The sequence of folding a piece of paper and the manner in which the folded paper is cut is shown in the following figures. How would this paper look when unfolded?



Ans

- 1.
- 2.
- 3.
- 4.

Question ID : 26433074792
 Option 1 ID : 264330293257
 Option 2 ID : 264330293259
 Option 3 ID : 264330293256
 Option 4 ID : 264330293258

Status : Answered
 Chosen Option : 3

Q.28 Select the option that represents the letters which, when sequentially placed from left to right in the blanks below, will complete the letter series.
 F _ _ Y _ _ K B _ O F _ B Y _

- Ans
- 1. OFKBOYK
 - 2. BYOKFOK
 - 3. KBOFYKO
 - 4. YOKBFOK

Question ID : 26433086955
 Option 1 ID : 264330341462
 Option 2 ID : 264330341461
 Option 3 ID : 264330341464
 Option 4 ID : 264330341463

Status : Answered
 Chosen Option : 3

Q.29 Select the option that is related to the fifth letter-cluster in the same way as the second letter-cluster is related to the first letter-cluster and the fourth letter-cluster is related to the third letter-cluster.

INDIA : FKAFX :: ESTONIA : BPQLKFX:: MALAYSIA : ?

- Ans
- 1. JPFXXIXV
 - 2. JXVPFXXI
 - 3. JXIXFXVP
 - 4. JXIXVPFX

Question ID : 264330145395
Option 1 ID : 264330569836
Option 2 ID : 264330569835
Option 3 ID : 264330569837
Option 4 ID : 264330569838
Status : Answered
Chosen Option : 4

Q.30 In a certain code language, 'PAINT' is written as 'ODYTN' and 'BRUSH' is written as 'CMMOZ'. How will 'HOUSE' be written in that language?

- Ans
- 1. WDNOS
 - 2. WPMOC
 - 3. PHYWS
 - 4. PBOMS

Question ID : 26433074758
Option 1 ID : 264330293122
Option 2 ID : 264330293120
Option 3 ID : 264330293121
Option 4 ID : 264330293123
Status : Not Attempted and Marked For Review
Chosen Option : --

Q.31 Select the option that represents the correct order of the given words as they would appear in an English dictionary?

1. Wrist
2. Wrangle
3. Workable
4. Wrongful
5. Woodland

- Ans
- 1. 3, 5, 2, 1, 4
 - 2. 3, 2, 5, 1, 4
 - 3. 5, 2, 3, 1, 4
 - 4. 5, 3, 2, 1, 4

Question ID : 26433067245
Option 1 ID : 264330263493
Option 2 ID : 264330263492
Option 3 ID : 264330263495
Option 4 ID : 264330263494
Status : Answered
Chosen Option : 4

Q.32 Select the correct mirror image of the given figure when the mirror is placed at MN as shown below.



- Ans
- 1. 8BEYTK@8
 - 2. 8BEYTK@8
 - 3. 8BEYTK@8
 - 4. 8BEYTK@8

Question ID : 26433085395

Option 1 ID : 264330335284

Option 2 ID : 264330335282

Option 3 ID : 264330335283

Option 4 ID : 264330335281

Status : Answered

Chosen Option : 3

Q.33 Two statements are given, followed by two conclusions numbered I and II. Assuming the statements to be true, even if they seem to be at variance with commonly known facts, decide which of the conclusions logically follow(s) from the statements.

Statements:

Some apples are oranges.

All oranges are fruits.

Conclusions:

I) All apples are fruits.

II) Some fruits are oranges.

- Ans
- 1. Neither Conclusion I nor II follows.
 - 2. Only Conclusion II follows.
 - 3. Both Conclusions I and II follow.
 - 4. Only Conclusion I follows

Question ID : 26433067702

Option 1 ID : 264330265323

Option 2 ID : 264330265321

Option 3 ID : 264330265322

Option 4 ID : 264330265320

Status : Answered

Chosen Option : 2

Q.34 Manohar cycles X km towards west and then turns right and cycles Y km to reach his office. Now, the shortest distance between the starting point and his office is 13 km. What can be the value of X and Y, respectively, (in km)?

- Ans
- 1. 12 and 5
 - 2. 8 and 5
 - 3. 11 and 6
 - 4. 6 and 7

Question ID : 264330129770

Option 1 ID : 264330508314

Option 2 ID : 264330508312

Option 3 ID : 264330508313

Option 4 ID : 264330508311

Status : Answered

Chosen Option : 1

Q.35 In a certain code language, 'EARS' is coded as '4268' and 'NICE' is coded as '9723'.
What is the code for 'E' in the given code language?

- Ans
- 1. 3
 - 2. 2
 - 3. 9
 - 4. 4

Question ID : 264330169653
Option 1 ID : 264330665312
Option 2 ID : 264330665313
Option 3 ID : 264330665314
Option 4 ID : 264330665311
Status : Answered
Chosen Option : 2

Q.36 Six people are sitting around a circular table facing the centre. P sits second to the left of Q. S is an immediate neighbour of both Q and U. T sits second to the left of R. Who is the immediate neighbour of both P and U?

- Ans
- 1. T
 - 2. S
 - 3. Q
 - 4. R

Question ID : 26433068169
Option 1 ID : 264330267188
Option 2 ID : 264330267190
Option 3 ID : 264330267191
Option 4 ID : 264330267189
Status : Answered
Chosen Option : 1

Q.37 Based on the position in the English alphabetical order, three of the following letter-clusters are alike in some manner and one is different. Select the odd letter-cluster.

- Ans
- 1. SWYX
 - 2. PTVU
 - 3. RVXW
 - 4. LOQP

Question ID : 264330145353
Option 1 ID : 264330569667
Option 2 ID : 264330569668
Option 3 ID : 264330569670
Option 4 ID : 264330569669
Status : Answered
Chosen Option : 4

Q.38 Four letter-clusters have been given, out of which three are alike in some manner and one is different. Select the odd letter-cluster.

- Ans 1. GCKD
 2. UQYR
 3. XOTP
 4. NJRK

Question ID : 264330180754
Option 1 ID : 264330708986
Option 2 ID : 264330708985
Option 3 ID : 264330708983
Option 4 ID : 264330708984
Status : Answered
Chosen Option : 3

Q.39 Two statements are given, followed by two conclusions numbered I and II. Assuming the statements to be true, even if they seem to be at variance with commonly known facts, decide which of the conclusions logically follow(s) from the statements.

Statements:
Some rivers are oceans.
All oceans are beaches.

Conclusions:
I. Some rivers are beaches.
II. All oceans are rivers.

- Ans 1. Only conclusion II follows
 2. Both conclusions I and II follow
 3. Neither conclusion I nor II follows
 4. Only conclusion I follows

Question ID : 26433056709
Option 1 ID : 264330221821
Option 2 ID : 264330221822
Option 3 ID : 264330221823
Option 4 ID : 264330221820
Status : Answered
Chosen Option : 4

Q.40 If '+' means 'x', '-' means '÷', 'x' means '+', and '÷' means '-', then what will be the value of the following expression?
 $42 \times 168 - 8 \div 4 + 3 = ?$

- Ans 1. 62
 2. 45
 3. 56
 4. 51

Question ID : 264330101246
Option 1 ID : 264330397532
Option 2 ID : 264330397530
Option 3 ID : 264330397531
Option 4 ID : 264330397529
Status : Answered
Chosen Option : 4

Q.41 Select the option that is related to the third word in the same way as the second word is related to the first word.
(The words must be considered as meaningful words and must not be related to each other based on the number of letters/number of consonants/vowels in the word.)
Artist : Painting :: Cobbler : ?

- Ans 1. Stitching clothes
 2. Fixing shoes
 3. Wooden repair work
 4. Fixes electricity

Question ID : 26433087295
Option 1 ID : 264330342817
Option 2 ID : 264330342818
Option 3 ID : 264330342819
Option 4 ID : 264330342820
Status : Answered
Chosen Option : 2

Q.42 Which two mathematical signs should be interchanged to make the given equation correct?

$$15 \times 3 \div 15 - (45 \times 3) - 10 + (13 \div 2) = 76$$

- Ans 1. + and ×
 2. × and +
 3. × and –
 4. ÷ and +

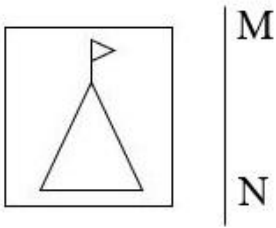
Question ID : 264330145314
Option 1 ID : 264330569512
Option 2 ID : 264330569514
Option 3 ID : 264330569513
Option 4 ID : 264330569511
Status : Answered
Chosen Option : 1

Q.43 If '+' means '–', '–' means '×', '×' means '÷', '÷' means '+', then what will come in place of the question mark (?) in the following equation?
 $23 - 5 \div 240 \times 8 + 14 = ?$

- Ans 1. 145
 2. 119
 3. 131
 4. 124

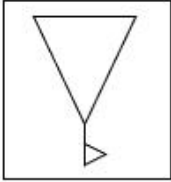
Question ID : 264330126057
Option 1 ID : 264330493903
Option 2 ID : 264330493900
Option 3 ID : 264330493901
Option 4 ID : 264330493902
Status : Answered
Chosen Option : 3

Q.44 Select the correct mirror image of the given figure when the mirror is placed at line MN as shown.

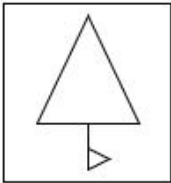


Ans

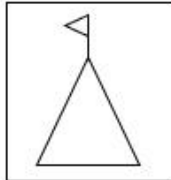
✗ 1.



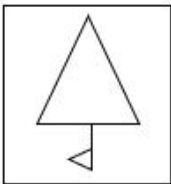
✗ 2.



✓ 3.



✗ 4.



Question ID : 26433056623
Option 1 ID : 264330221478
Option 2 ID : 264330221477
Option 3 ID : 264330221479
Option 4 ID : 264330221476

Status : Answered

Chosen Option : 3

Q.45 Two statements are given followed by two conclusions numbered I and II. Assuming the statements to be true, even if they seem to be at variance with commonly known facts, decide which of the conclusions logically follow(s) from the statements.

Statements:

All teas are juices.

All juices are cocktails.

Conclusions:

I. All teas are cocktails.

II. All cocktails are definitely juices.

- Ans**
- 1. Both conclusions I and II follow
 - 2. Only conclusion II follows
 - 3. Only conclusion I follows
 - 4. Neither conclusion I nor II follows

Question ID : 26433058039

Option 1 ID : 264330227142

Option 2 ID : 264330227141

Option 3 ID : 264330227140

Option 4 ID : 264330227143

Status : Answered

Chosen Option : 3

Q.46 In a certain code language, 'ACTOR' is coded as ROYCA and 'NURSE' is coded as ESWUN. How will 'JUDGE' be coded in the same language?

- Ans**
- 1. EGJUI
 - 2. GEIUJ
 - 3. EGUIJ
 - 4. EGIUJ

Question ID : 264330132201

Option 1 ID : 264330517902

Option 2 ID : 264330517900

Option 3 ID : 264330517899

Option 4 ID : 264330517901

Status : Answered

Chosen Option : 4

Q.47 Which of the following numbers will replace the question mark (?) in the given series?
76, 99, 135, 185, 250, ?

- Ans**
- 1. 330
 - 2. 331
 - 3. 328
 - 4. 315

Question ID : 26433069398

Option 1 ID : 264330272106

Option 2 ID : 264330272107

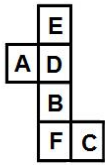
Option 3 ID : 264330272104

Option 4 ID : 264330272105

Status : Answered

Chosen Option : 2

Q.48 A cube is made by folding the given sheet. In the cube so formed, which letter will be on the face opposite to the face having 'F'?



- Ans** 1. D
 2. E
 3. B
 4. A

Question ID : 26433065671
Option 1 ID : 264330257245
Option 2 ID : 264330257244
Option 3 ID : 264330257246
Option 4 ID : 264330257247
Status : Answered
Chosen Option : 1

Q.49 Which of the following numbers will replace the question mark (?) in the given series?

4, 11, 19, 31, 52, 89, ?

- Ans** 1. 151
 2. 105
 3. 150
 4. 115

Question ID : 26433059922
Option 1 ID : 264330234521
Option 2 ID : 264330234522
Option 3 ID : 264330234523
Option 4 ID : 264330234520
Status : Answered
Chosen Option : 1

Q.50 Which of the following numbers will replace the question mark (?) in the given series?

134, 129, 122, ?, 102, 89

- Ans** 1. 117
 2. 113
 3. 111
 4. 115

Question ID : 26433091010
Option 1 ID : 264330357450
Option 2 ID : 264330357449
Option 3 ID : 264330357452
Option 4 ID : 264330357451
Status : Answered
Chosen Option : 3

Q.1 Which of the following Articles of the Indian Constitution empowers the Parliament to restrict or abrogate the fundamental rights of the members of the armed forces, para-military forces, police forces, intelligence agencies and analogous forces?

- Ans**
- 1. Article 35
 - 2. Article 31
 - 3. Article 33
 - 4. Article 37

Question ID : 264330113391
Option 1 ID : 264330445651
Option 2 ID : 264330445649
Option 3 ID : 264330445652
Option 4 ID : 264330445650
Status : Not Answered
Chosen Option : --

Q.2 Mohenjodaro site of Harappan civilisation is situated on the bank of which river?

- Ans**
- 1. Jhelum river
 - 2. Indus river
 - 3. Gharghara river
 - 4. Beas river

Question ID : 264330164839
Option 1 ID : 264330646485
Option 2 ID : 264330646484
Option 3 ID : 264330646483
Option 4 ID : 264330646486
Status : Answered
Chosen Option : 2

Q.3 The Wadali Brothers are _____ singers.

- Ans**
- 1. Pandavani
 - 2. Lavani
 - 3. Sufi
 - 4. Bhatiali

Question ID : 264330145157
Option 1 ID : 264330568885
Option 2 ID : 264330568883
Option 3 ID : 264330568884
Option 4 ID : 264330568886
Status : Answered
Chosen Option : 3

Q.4 Rongker festival is celebrated by which of the following tribes?

- Ans**
- 1. Karbi
 - 2. Gond
 - 3. Bhil
 - 4. Ao

Question ID : 264330164804
Option 1 ID : 264330646344
Option 2 ID : 264330646345
Option 3 ID : 264330646346
Option 4 ID : 264330646343
Status : Not Answered
Chosen Option : --

Q.5 Who among the following Mauryan kings turned to Buddhism and its tenet of non-violence after the Kalinga war?

- Ans
- 1. Chandragupta Maurya
 - 2. Bindusara
 - 3. Ashoka
 - 4. Dasharatha

Question ID : 264330165559
Option 1 ID : 264330649315
Option 2 ID : 264330649316
Option 3 ID : 264330649317
Option 4 ID : 264330649318
Status : Answered
Chosen Option : 3

Q.6 What is the name of the large supercontinent that existed 200 million years ago when all the continents were together?

- Ans
- 1. Asia
 - 2. India
 - 3. Pangea
 - 4. America

Question ID : 26433064468
Option 1 ID : 264330252464
Option 2 ID : 264330252465
Option 3 ID : 264330252467
Option 4 ID : 264330252466
Status : Answered
Chosen Option : 3

Q.7 Who explained the structure of protein?

- Ans
- 1. RF Rose
 - 2. Emil Fischer
 - 3. Johnson and Cristae
 - 4. Pauling and Corey

Question ID : 26433086616
Option 1 ID : 264330340106
Option 2 ID : 264330340105
Option 3 ID : 264330340107
Option 4 ID : 264330340108
Status : Answered
Chosen Option : 1

Q.8 According to Census of India 2011, identify the third largest spoken language in India.

- Ans
- 1. Tamil
 - 2. Marathi
 - 3. Bengali
 - 4. Hindi

Question ID : 264330166809
Option 1 ID : 264330654272
Option 2 ID : 264330654273
Option 3 ID : 264330654271
Option 4 ID : 264330654274
Status : Answered
Chosen Option : 1

Q.9 Which of the following taxes is proportional in nature?

- Ans
- 1. Capital Gains Tax
 - 2. Income Tax
 - 3. Corporation Tax
 - 4. Goods and Services Tax

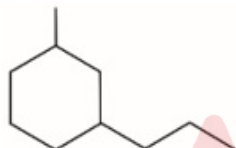
Question ID : 264330145241
Option 1 ID : 264330569222
Option 2 ID : 264330569221
Option 3 ID : 264330569219
Option 4 ID : 264330569220
Status : Not Answered
Chosen Option : --

Q.10 Gopika Varma has won the Sangeet Natak Akademi Award in 2019 in which of the following dance forms?

- Ans
- 1. Kathak
 - 2. Bharatanatyam
 - 3. Mohiniyattam
 - 4. Kuchipudi

Question ID : 264330145155
Option 1 ID : 264330568876
Option 2 ID : 264330568877
Option 3 ID : 264330568878
Option 4 ID : 264330568875
Status : Answered
Chosen Option : 1

Q.11 What is the IUPAC name of the organic compound depicted in the figure?



- Ans
- 1. 1-Methyl-1-Propylcyclohexane
 - 2. 1-Methyl-2-Propylcyclohexane
 - 3. 1-Methyl-4-Propylcyclohexane
 - 4. 1-Methyl-3-Propylcyclohexane

Question ID : 264330131672
Option 1 ID : 264330515787
Option 2 ID : 264330515788
Option 3 ID : 264330515790
Option 4 ID : 264330515789
Status : Answered
Chosen Option : 3

Q.12 Identify whether the given statements about ionisation energy are correct or incorrect.
Statement A: The ionisation energy of an atom is the amount of energy that is required to remove an electron from a mole of atoms in the gas phase.
Statement B: The ionisation energy increases from top to bottom in groups and decreases from left to right across a period.

- Ans**
- 1. Both Statements A and B are correct
 - 2. Only Statement A is correct
 - 3. Both Statements A and B are incorrect
 - 4. Only Statement B is correct

Question ID : 264330137996

Option 1 ID : 264330540594

Option 2 ID : 264330540591

Option 3 ID : 264330540592

Option 4 ID : 264330540593

Status : **Not Attempted and Marked For Review**

Chosen Option : --

Q.13 Which of the following sports does NOT have its apex national governing body headquartered in New Delhi?

- Ans**
- 1. Athletes Federation of India
 - 2. Badminton Association of India
 - 3. Volleyball Federation of India
 - 4. Hockey India

Question ID : 26433092331

Option 1 ID : 264330362623

Option 2 ID : 264330362624

Option 3 ID : 264330362621

Option 4 ID : 264330362622

Status : **Answered**

Chosen Option : 3

Q.14 Which of the following is an autobiography of a Bengali illiterate woman who secretly acquired literacy skills to read sacred texts in an age when girls and women were denied education and deemed fit only for household chores?

- Ans**
- 1. Ente Katha by Kamala Das
 - 2. Amar Jiban by Rassundari Devi
 - 3. Jina Amucha by Baby Kamble
 - 4. Smritichitre by Lakshmibai Tilak

Question ID : 26433071427

Option 1 ID : 264330280133

Option 2 ID : 264330280134

Option 3 ID : 264330280135

Option 4 ID : 264330280132

Status : **Answered**

Chosen Option : 2

Q.15 The Lucknow Pact was signed in _____ by Congress and the Muslim League to work in alliance for representative government.

- Ans
- 1. 1920
 - 2. 1914
 - 3. 1916
 - 4. 1918

Question ID : 264330112346
Option 1 ID : 264330441472
Option 2 ID : 264330441469
Option 3 ID : 264330441470
Option 4 ID : 264330441471
Status : Answered
Chosen Option : 3

Q.16 What is most important health benefits of Vitamin D?

- Ans
- 1. Strengthening of bones and muscles
 - 2. Reducing the blood pressure
 - 3. Rapid growth after teenage years
 - 4. Elevation of heartbeat

Question ID : 26433066708
Option 1 ID : 264330261357
Option 2 ID : 264330261358
Option 3 ID : 264330261356
Option 4 ID : 264330261359
Status : Answered
Chosen Option : 2

Q.17 What is the name of the geostationary satellite launched by ISRO in 1983 that provides high power TV broadcasting and telecommunications national coverage transponders?

- Ans
- 1. Bhaskara-I
 - 2. Insat-1B
 - 3. GSAT-7
 - 4. RISAT-1

Question ID : 264330111325
Option 1 ID : 264330437387
Option 2 ID : 264330437388
Option 3 ID : 264330437385
Option 4 ID : 264330437386
Status : Answered
Chosen Option : 3

Q.18 Which Article of the Indian Constitution provides for equal opportunity for all citizens in the matter of employment under the state?

- Ans 1. Article 17
 2. Article 16
 3. Article 18
 4. Article 15

Question ID : 264330114489
Option 1 ID : 264330450043
Option 2 ID : 264330450042
Option 3 ID : 264330450044
Option 4 ID : 264330450041
Status : Answered
Chosen Option : 4

Q.19 Which Rajput princess belonged to the Bhakti tradition of Medieval India, whose songs were devoted to Lord Krishna?

- Ans 1. Mirabai
 2. Muddupalani
 3. Lal Ded
 4. Akka Mahadevi

Question ID : 26433074821
Option 1 ID : 264330293373
Option 2 ID : 264330293375
Option 3 ID : 264330293372
Option 4 ID : 264330293374
Status : Answered
Chosen Option : 1

Q.20 When was the National Interim Government of India formed, under Jawaharlal Nehru?

- Ans 1. 2 September 1946
 2. 2 September 1947
 3. 20 September 1946
 4. 2 September 1945

Question ID : 264330106613
Option 1 ID : 264330418756
Option 2 ID : 264330418754
Option 3 ID : 264330418755
Option 4 ID : 264330418753
Status : Answered
Chosen Option : 4

Q.21 Which among the following is INCORRECT about the salient features of the 73rd Amendment Act?

- Ans 1. The Act gives a Constitutional status to the Panchayati Raj Institutions.
 2. It contains 29 functional items of the Panchayats and deals with Article 243 to 243(O).
 3. The Act has added the Eleventh Schedule to the Constitution of India.
 4. The Act corresponds to Part III of the Constitution of India.

Question ID : 264330145272
Option 1 ID : 264330569346
Option 2 ID : 264330569345
Option 3 ID : 264330569344
Option 4 ID : 264330569343
Status : Answered
Chosen Option : 3

Q.22 Which element of the boron family has a high boiling point, making it ideal for recording temperatures that would vaporise a thermometer?

- Ans
- 1. Thallium
 - 2. Aluminium
 - 3. Gallium
 - 4. Indium

Question ID : 264330110058
Option 1 ID : 264330432509
Option 2 ID : 264330432512
Option 3 ID : 264330432510
Option 4 ID : 264330432511
Status : Answered
Chosen Option : 1

Q.23 How many medal(s) did India win in the World Athletics Championship 2022?

- Ans
- 1. 4
 - 2. 2
 - 3. 3
 - 4. 1

Question ID : 264330109685
Option 1 ID : 264330431020
Option 2 ID : 264330431018
Option 3 ID : 264330431019
Option 4 ID : 264330431017
Status : Answered
Chosen Option : 3

Q.24 Who became the first Indian to win the prestigious Zurich Diamond League Final 2022 in Switzerland?

- Ans
- 1. Rameshbabu Pragganandhaa
 - 2. Mary Kom
 - 3. Neeraj Chopra
 - 4. PV Sindhu

Question ID : 264330119248
Option 1 ID : 264330467279
Option 2 ID : 264330467280
Option 3 ID : 264330467282
Option 4 ID : 264330467281
Status : Answered
Chosen Option : 3

Q.25 Which of the following government departments is associated with infrastructure development in India?

- Ans
- 1. Division of Economic Agenda
 - 2. Division of Electricity Agenda
 - 3. Department of Energy Affairs
 - 4. Department of Economic Affairs

Question ID : 264330163203
Option 1 ID : 264330640124
Option 2 ID : 264330640126
Option 3 ID : 264330640123
Option 4 ID : 264330640125
Status : Answered
Chosen Option : 4

Q.26 Identify an anomaly element that belongs to both group 1 and group 17.

- Ans 1. Oxygen
 2. Hydrogen
 3. Chlorine
 4. Nitrogen

Question ID : 264330134866
Option 1 ID : 264330528400
Option 2 ID : 264330528399
Option 3 ID : 264330528402
Option 4 ID : 264330528401
Status : Answered
Chosen Option : 2

Q.27 The Vijayanagar kingdom was established by _____ in 1336.

- Ans 1. Venkata II
 2. Devaraya II
 3. Krishnadevaraya
 4. Harihara and Bukka

Question ID : 264330106565
Option 1 ID : 264330418563
Option 2 ID : 264330418564
Option 3 ID : 264330418562
Option 4 ID : 264330418561
Status : Answered
Chosen Option : 4

Q.28 Which of the following is the new alluvium deposited by floods in the Ganga Plain?

- Ans 1. Regur
 2. Khadar
 3. Kachhar
 4. Bhangar

Question ID : 264330119789
Option 1 ID : 264330469433
Option 2 ID : 264330469432
Option 3 ID : 264330469431
Option 4 ID : 264330469434
Status : Answered
Chosen Option : 2

Q.29 Which of the following Articles of the Constitution of India provides that the Governor appoints the Chief Minister and later, the Chief Minister recommends the appointment of ministers to the Governor?

- Ans 1. Article 167
 2. Article 165
 3. Article 164
 4. Article 163

Question ID : 264330113440
Option 1 ID : 264330445846
Option 2 ID : 264330445847
Option 3 ID : 264330445848
Option 4 ID : 264330445845
Status : Answered
Chosen Option : 3

Q.30 What was the rural literacy rate in India, according to the 2011 Census?

- Ans
- 1. 67.00%
 - 2. 66.77%
 - 3. 67.77%
 - 4. 69.00%

Question ID : 264330110657
Option 1 ID : 264330434906
Option 2 ID : 264330434905
Option 3 ID : 264330434908
Option 4 ID : 264330434907
Status : Answered
Chosen Option : 2

Q.31 FIFA Women's World Cup 2023 will be hosted by_____.

- Ans
- 1. Australia and New Zealand
 - 2. USA and Canada
 - 3. France and Germany
 - 4. Brazil and Argentina

Question ID : 264330109845
Option 1 ID : 264330431659
Option 2 ID : 264330431660
Option 3 ID : 264330431657
Option 4 ID : 264330431658
Status : Answered
Chosen Option : 3

Q.32 The President of India decides on the question as to the disqualification of Members of Parliament in consultation with the_____.

- Ans
- 1. Supreme Court of India
 - 2. Parliament
 - 3. Vice President
 - 4. Election Commission of India

Question ID : 264330130470
Option 1 ID : 264330510993
Option 2 ID : 264330510991
Option 3 ID : 264330510992
Option 4 ID : 264330510994
Status : Answered
Chosen Option : 1

Q.33 Mohiniyattam, a classical dance of India belongs to which of the following states?

- Ans
- 1. Uttar Pradesh
 - 2. Kerala
 - 3. Andhra Pradesh
 - 4. Manipur

Question ID : 26433094863
Option 1 ID : 264330372273
Option 2 ID : 264330372276
Option 3 ID : 264330372274
Option 4 ID : 264330372275
Status : Answered
Chosen Option : 2

Q.34 Which of the following is NOT an example of manufacturing activity?

- Ans
- 1. Yarn made from cotton
 - 2. Sugar made from sugarcane
 - 3. Paper made from wood
 - 4. Mutual fund product made by combining debt and equity funds

Question ID : 264330168856
Option 1 ID : 264330662238
Option 2 ID : 264330662236
Option 3 ID : 264330662235
Option 4 ID : 264330662237
Status : Answered
Chosen Option : 4

Q.35 Which of the following is INCORRECT match?

- Ans
- 1. Pressure – Pascal
 - 2. Volume – Meter
 - 3. Force – Newton
 - 4. Work done – Joule

Question ID : 264330131764
Option 1 ID : 264330516158
Option 2 ID : 264330516157
Option 3 ID : 264330516156
Option 4 ID : 264330516155
Status : Answered
Chosen Option : 2

Q.36 Which part of the Indian Constitution deals with directive principles of state policy?

- Ans
- 1. Part VII
 - 2. Part VI
 - 3. Part V
 - 4. Part IV

Question ID : 264330111527
Option 1 ID : 264330438196
Option 2 ID : 264330438195
Option 3 ID : 264330438194
Option 4 ID : 264330438193
Status : Answered
Chosen Option : 4

Q.37 Mango showers are:

- Ans
- 1. cyclones
 - 2. jet streams
 - 3. storms
 - 4. pre-monsoon showers

Question ID : 264330169988
Option 1 ID : 264330666628
Option 2 ID : 264330666629
Option 3 ID : 264330666630
Option 4 ID : 264330666627
Status : Answered
Chosen Option : 4

Q.38 What type of climate is found in North Western Europe, West Coast of North America, North of California, Southern Chile, South-eastern Australia and New Zealand?

- Ans** 1. Marine west coast climate
 2. Cold snow forest climate
 3. Subtropical steppe climate
 4. Tropical wet and dry climate

Question ID : 264330145190
Option 1 ID : 264330569015
Option 2 ID : 264330569016
Option 3 ID : 264330569017
Option 4 ID : 264330569018
Status : Answered
Chosen Option : 1

Q.39 Which of the following places of India can have maximum temperature difference between the day and night?

- Ans** 1. Thiruvananthapuram
 2. Jaisalmer
 3. Port Blair
 4. Kanyakumari

Question ID : 264330169312
Option 1 ID : 264330664028
Option 2 ID : 264330664027
Option 3 ID : 264330664029
Option 4 ID : 264330664030
Status : Answered
Chosen Option : 2

Q.40 Mohiniyattam belongs to which of the following states?

- Ans** 1. Jharkhand
 2. Chhattisgarh
 3. Karnataka
 4. Kerala

Question ID : 264330164789
Option 1 ID : 264330646284
Option 2 ID : 264330646285
Option 3 ID : 264330646286
Option 4 ID : 264330646283
Status : Answered
Chosen Option : 4

Q.41 Haripriya Namboodiri is an exponent of which Indian classical dance form?

- Ans** 1. Kathakali
 2. Kuchipudi
 3. Odissi
 4. Bharatanatyam

Question ID : 26433086721
Option 1 ID : 264330340526
Option 2 ID : 264330340528
Option 3 ID : 264330340527
Option 4 ID : 264330340525
Status : Not Answered
Chosen Option : --

Q.42 During one of the Five-Year Plans which of the following politicians gave the slogan 'Garibi Hatao'?

- Ans
- 1. Charan Singh
 - 2. Gainsi Zail Singh
 - 3. Morarji Desai
 - 4. Indira Gandhi

Question ID : 264330145248
Option 1 ID : 264330569250
Option 2 ID : 264330569249
Option 3 ID : 264330569247
Option 4 ID : 264330569248
Status : Not Answered
Chosen Option : --

Q.43 During Which phase of the cell cycle does metabolic changes assemble the cytoplasmic material required for mitosis and cytokinesis?

- Ans
- 1. G2 phase
 - 2. G1 phase
 - 3. S phase
 - 4. M phase

Question ID : 264330145197
Option 1 ID : 264330569045
Option 2 ID : 264330569044
Option 3 ID : 264330569043
Option 4 ID : 264330569046
Status : Not Answered
Chosen Option : --

Q.44 Expenditure of the government on health facilities, education and fixed-asset acquisition is termed as _____.

- Ans
- 1. revenue expenditure
 - 2. plan expenditure
 - 3. non-plan revenue expenditure
 - 4. capital expenditure

Question ID : 264330141435
Option 1 ID : 264330554075
Option 2 ID : 264330554076
Option 3 ID : 264330554078
Option 4 ID : 264330554077
Status : Answered
Chosen Option : 4

Q.45 Which of the following is the autobiography of the first Indian President Dr. Rajendra Prasad?

- Ans 1. Atmavrittanta
 2. Atmakatha
 3. A Shot at History
 4. My Country My Life

Question ID : 264330145182
Option 1 ID : 264330568986
Option 2 ID : 264330568983
Option 3 ID : 264330568984
Option 4 ID : 264330568985
Status : Answered
Chosen Option : 1

Q.46 Which of the following policy measures is a step towards liberalisation?

- Ans 1. Enhancing tariffs
 2. Eliminating licenses for importing a majority of goods
 3. Imposing limits on capital accumulation
 4. Increasing requirements for bank reserves and restrictions on interest rates

Question ID : 26433064579
Option 1 ID : 264330252910
Option 2 ID : 264330252909
Option 3 ID : 264330252908
Option 4 ID : 264330252911
Status : Answered
Chosen Option : 2

Q.47 Which of the following cultural festivals of South India is associated with the folklore of King Mahabali?

- Ans 1. Gudi Padwa
 2. Ugadi
 3. Pongal
 4. Onam

Question ID : 264330145144
Option 1 ID : 264330568833
Option 2 ID : 264330568834
Option 3 ID : 264330568831
Option 4 ID : 264330568832
Status : Answered
Chosen Option : 2

Q.48 Europeans entered India with a mindset of trading only. This streak was initiated by which of the following European nations?

- Ans 1. French
 2. Portuguese
 3. British
 4. Dutch

Question ID : 264330165386
Option 1 ID : 264330648623
Option 2 ID : 264330648625
Option 3 ID : 264330648626
Option 4 ID : 264330648624
Status : Answered
Chosen Option : 2

Q.49 How big are red blood cells in diameter?

- Ans 1. 7.5 μm
 2. 2.0 μm
 3. 4.0 μm
 4. 40.0 μm

Question ID : 264330145215
Option 1 ID : 264330569116
Option 2 ID : 264330569115
Option 3 ID : 264330569118
Option 4 ID : 264330569117
Status : Not Answered
Chosen Option : --

Q.50 In which year Timur's invasion of Delhi took place?

- Ans 1. 1492
 2. 1221
 3. 1526
 4. 1398

Question ID : 264330109005
Option 1 ID : 264330428300
Option 2 ID : 264330428297
Option 3 ID : 264330428299
Option 4 ID : 264330428298
Status : Not Answered
Chosen Option : --

Section : Quantitative Aptitude

Q.1 Find the value of $\sqrt{\frac{1 - \tan A}{1 + \tan A}}$.

- Ans 1. $\sqrt{\frac{1 + \sin 2A}{\cos 2A}}$
 2. $\sqrt{\frac{1 - \sin 2A}{\cos 2A}}$
 3. $\sqrt{\frac{1 + \sin A}{\cos A}}$
 4. $\sqrt{\frac{1 - \sin A}{\cos A}}$

Question ID : 264330131547
Option 1 ID : 264330515291
Option 2 ID : 264330515292
Option 3 ID : 264330515294
Option 4 ID : 264330515293
Status : Answered
Chosen Option : 2

Q.2 If the diameter of a sphere is reduced to its half, then the volume would be:

Ans

- 1. increased by $\frac{1}{4}$ of the former volume
- 2. reduced by $\frac{1}{4}$ of the former volume
- 3. increased by $\frac{1}{8}$ of the former volume
- 4. reduced by $\frac{1}{8}$ of the former volume

Question ID : 264330145110

Option 1 ID : 264330568695

Option 2 ID : 264330568697

Option 3 ID : 264330568698

Option 4 ID : 264330568696

Status : Answered

Chosen Option : 4

Q.3 The HCF of 3888 and 3969 is:

Ans

- 1. 81
- 2. 73
- 3. 83
- 4. 71

Question ID : 264330145042

Option 1 ID : 264330568423

Option 2 ID : 264330568426

Option 3 ID : 264330568425

Option 4 ID : 264330568424

Status : Answered

Chosen Option : 1

Q.4 Which is the smallest natural number that is exactly divisible by each of 96, 108 and 144?

Ans

- 1. 864
- 2. 2592
- 3. 1296
- 4. 1728

Question ID : 264330103227

Option 1 ID : 264330405215

Option 2 ID : 264330405214

Option 3 ID : 264330405213

Option 4 ID : 264330405216

Status : Answered

Chosen Option : 1

Q.5 Find the HCF of 240, 280 and 560.

- Ans 1. 30
 2. 10
 3. 20
 4. 40

Question ID : 26433065034
Option 1 ID : 264330254731
Option 2 ID : 264330254730
Option 3 ID : 264330254729
Option 4 ID : 264330254728
Status : Answered
Chosen Option : 4

Q.6 The following table shows the number of mobile phones sold by four different stores in four different years.

Stores	2012	2013	2014	2015
P	178	183	205	225
Q	133	198	220	235
R	284	250	220	198
S	225	243	199	205

Find the difference between the number of mobile phones sold by store Q in 2013 and store S in 2015.

- Ans 1. 12
 2. 7
 3. 10
 4. 8

Question ID : 264330158616
Option 1 ID : 264330621825
Option 2 ID : 264330621824
Option 3 ID : 264330621823
Option 4 ID : 264330621826
Status : Answered
Chosen Option : 2

Q.7 The table below shows the production of jute fabric (in lakh metre) by two Companies P and Q during 2001 to 2005.

Year	Company P	Company Q
2001	100	96
2002	120	130
2003	108	100
2004	190	180
2005	240	275

In which year/years, did Company Q produce more fabric than Company P?

- Ans
- 1. 2002
 - 2. 2005
 - 3. 2003, 2005
 - 4. 2002, 2005

Question ID : 264330165072
Option 1 ID : 264330647415
Option 2 ID : 264330647417
Option 3 ID : 264330647418
Option 4 ID : 264330647416
Status : Answered
Chosen Option : 1

Q.8 A car, during its entire journey of 5 hours, travels the first 45 minutes at a certain speed, the next 75 minutes at a speed of 85 km/h, and the last 3 hours at a speed of 70 km/h. During its entire journey, the average speed of the car is found to be 73 km/h. What is the speed (in km/h) of the car during the first 45 minutes?

- Ans
- 1. 65
 - 2. 68
 - 3. 62
 - 4. 72

Question ID : 264330103989
Option 1 ID : 264330408258
Option 2 ID : 264330408257
Option 3 ID : 264330408260
Option 4 ID : 264330408259
Status : Answered
Chosen Option : 1

Q.9 Peter invested a certain sum of money in a scheme paying 10% simple interest per annum, while Rachel invested half of the sum that Peter invested in a scheme paying 10% interest per annum compounded annually. Also, while Peter invested for 2 years, Rachel invested for 3 years. If the difference in the interest earned by Peter and Rachel was ₹897, what was the sum that Rachel had invested?

- Ans
- 1. ₹13,000
 - 2. ₹12,900
 - 3. ₹13,100
 - 4. ₹12,960

Question ID : 264330145053
Option 1 ID : 264330568470
Option 2 ID : 264330568468
Option 3 ID : 264330568469
Option 4 ID : 264330568467
Status : Not Attempted and Marked For Review
Chosen Option : --

Q.10 The price of almonds is increased by 10%. By what percentage should the consumption be decreased so that the expenditure remains the same?

- Ans
- ✓ 1. $9\frac{1}{11}\%$
 - ✗ 2. $5\frac{3}{11}\%$
 - ✗ 3. $8\frac{1}{11}\%$
 - ✗ 4. $10\frac{3}{11}\%$

Question ID : 264330145038

Option 1 ID : 264330568408

Option 2 ID : 264330568410

Option 3 ID : 264330568407

Option 4 ID : 264330568409

Status : Answered

Chosen Option : 1

Q.11 A vendor marked the selling price of a table at ₹5,670 after adding 35% profit to its cost price. Since the sale was very low at this price level, he decided to sell the table with 12% profit. Find the new selling price (in ₹).

- Ans
- ✗ 1. 4,810
 - ✗ 2. 4,750
 - ✓ 3. 4,704
 - ✗ 4. 4,608

Question ID : 264330131519

Option 1 ID : 264330515179

Option 2 ID : 264330515180

Option 3 ID : 264330515181

Option 4 ID : 264330515182

Status : Answered

Chosen Option : 3

Q.12 The time taken to travel the same distance by three cars is in the ratio of 12:15:10. What is the ratio of the speeds of the three cars?

- Ans
- ✗ 1. 4 : 5 : 6
 - ✗ 2. 4 : 6 : 5
 - ✓ 3. 5 : 4 : 6
 - ✗ 4. 5 : 6 : 4

Question ID : 264330103971

Option 1 ID : 264330408186

Option 2 ID : 264330408187

Option 3 ID : 264330408185

Option 4 ID : 264330408188

Status : Answered

Chosen Option : 3

Q.13 Find the area of a triangle whose length of two sides are 4 cm and 5 cm and the angle between them is 45° .

- Ans
- 1. $4\sqrt{2} \text{ cm}^2$
 - 2. $7\sqrt{2} \text{ cm}^2$
 - 3. $5\sqrt{2} \text{ cm}^2$
 - 4. $6\sqrt{2} \text{ cm}^2$

Question ID : 264330103632
Option 1 ID : 264330406836
Option 2 ID : 264330406833
Option 3 ID : 264330406835
Option 4 ID : 264330406834
Status : Answered
Chosen Option : 3

Q.14 If a shopkeeper allows a discount of 10% to his customers and still gains 30%, then the marked price of an article which costs ₹450 is:

- Ans
- 1. ₹700
 - 2. ₹650
 - 3. ₹500
 - 4. ₹750

Question ID : 264330104506
Option 1 ID : 264330410327
Option 2 ID : 264330410326
Option 3 ID : 264330410325
Option 4 ID : 264330410328
Status : Answered
Chosen Option : 2

Q.15 The fourth proportional to 0.3, 0.8 and 0.108 is:

- Ans
- 1. 0.144
 - 2. 0.124
 - 3. 0.288
 - 4. 0.482

Question ID : 264330145036
Option 1 ID : 264330568399
Option 2 ID : 264330568401
Option 3 ID : 264330568400
Option 4 ID : 264330568402
Status : Answered
Chosen Option : 3

Q.16 Simplify the given expression.

$$\frac{(3.254 \times 3.254 \times 3.254) - (0.746 \times 0.746 \times 0.746)}{(3.254 \times 3.254) + (0.746 \times 0.746) + (3.254 \times 0.746)}$$

- Ans
- 1. 3.156
 - 2. 4.508
 - 3. 2.146
 - 4. 2.508

Question ID : 264330157769

Option 1 ID : 264330618437

Option 2 ID : 264330618436

Option 3 ID : 264330618438

Option 4 ID : 264330618435

Status : Answered

Chosen Option : 4

Q.17 The price of a land passing through three hands rises on the whole by 65%. The first and second sellers earned 20% and 25% profit, respectively. Find the profit percentage earned by the third seller.

- Ans
- 1. 10%
 - 2. 20%
 - 3. 25%
 - 4. 15%

Question ID : 264330102343

Option 1 ID : 264330401838

Option 2 ID : 264330401837

Option 3 ID : 264330401840

Option 4 ID : 264330401839

Status : Answered

Chosen Option : 1

Adda247

Q.18 Study the given table and answer the question that follows.

The table shows the number of people who responded to a survey about their favourite style of music.

Age	18-20	21-30	31+
Classical	8	5	15
Pop	5	11	10
Hip-Hop	6	9	8
Rock	9	7	13
Total	28	32	46

What percentage of the total sample indicated that Rock is their favourite style of music (rounded off to 2 decimal places)?

- Ans** ✓ 1. 27.36%
✗ 2. 18.25%
✗ 3. 29.65%
✗ 4. 22.35%

Question ID : 264330158262

Option 1 ID : 264330620409

Option 2 ID : 264330620407

Option 3 ID : 264330620410

Option 4 ID : 264330620408

Status : **Not Attempted and Marked For Review**

Chosen Option : --

Q.19 The following table shows the percentage population of four towns below poverty line and the proportion of males and females:

Town	Percentage of population below poverty line	Below poverty line	Above poverty line
		Male : Female	Male : Female
A	10	1 : 3	3 : 2
B	15	3 : 4	1 : 2
C	20	2 : 3	5 : 3
D	25	4 : 5	5 : 4

If the total population of town C is 8000 then what is the number of females above the poverty line in state C?

- Ans** ✗ 1. 2000
✗ 2. 2200
✓ 3. 2400
✗ 4. 2600

Question ID : 264330167244

Option 1 ID : 264330655971

Option 2 ID : 264330655972

Option 3 ID : 264330655973

Option 4 ID : 264330655974

Status : **Answered**

Chosen Option : 3

Q.20

The value of $\frac{(157 \times 157) + (157 \times 133) + (133 \times 133)}{(157 \times 157 \times 157) - (133 \times 133 \times 133)}$ is:

Ans

✓ 1. $\frac{1}{24}$

✗ 2. 24

✗ 3. 290

✗ 4. $\frac{1}{290}$

Question ID : 264330157765

Option 1 ID : 264330618420

Option 2 ID : 264330618419

Option 3 ID : 264330618421

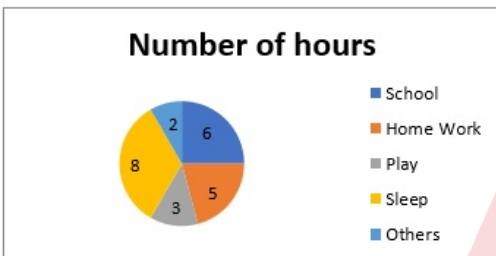
Option 4 ID : 264330618422

Status : Answered

Chosen Option : 1

Q.21

The number of hours spent by a student on different activities as shown in the following pie chart:



The central angle corresponding to the sleeping time is what percentage of the whole central angle?

✗ 1. 66.66%

✓ 2. 33.33%

✗ 3. 55%

✗ 4. 50%

Question ID : 264330145081

Option 1 ID : 264330568580

Option 2 ID : 264330568579

Option 3 ID : 264330568582

Option 4 ID : 264330568581

Status : Answered

Chosen Option : 2

Q.22 The area of a rectangular field is 480 m^2 . If the length is 20% more than the breadth, then the length of the rectangular field is:

- Ans
- 1. 30 m
 - 2. 20 m
 - 3. 24 m
 - 4. 27 m

Question ID : 264330165653
Option 1 ID : 264330649691
Option 2 ID : 264330649694
Option 3 ID : 264330649693
Option 4 ID : 264330649692
Status : Answered
Chosen Option : 3

Q.23 In a circle centred at O, PQ is a tangent at P. Furthermore, AB is the chord of the circle and is extended to Q. If $PQ = 12 \text{ cm}$ and $QB = 8 \text{ cm}$, then the length of AB is equal to:

- Ans
- 1. 20 cm
 - 2. 4 cm
 - 3. 10 cm
 - 4. 8 cm

Question ID : 264330165494
Option 1 ID : 264330649058
Option 2 ID : 264330649055
Option 3 ID : 264330649057
Option 4 ID : 264330649056
Status : Answered
Chosen Option : 1

Q.24 The upstream speed of a boat is 8 km/h and the downstream is 15 km/h . What is the speed of the boat in still water and the speed of the stream (in km/h), respectively?

- Ans
- 1. 11 and 3
 - 2. 3 and 11
 - 3. 11.5 and 3.5
 - 4. 3.5 and 11.5


Question ID : 264330119531
Option 1 ID : 264330468409
Option 2 ID : 264330468410
Option 3 ID : 264330468407
Option 4 ID : 264330468408
Status : Answered
Chosen Option : 3

Q.25 A number is first decreased by 28% and then increased by 28%. The number so obtained is 784 less than the original number. Find the value of the original number.

- Ans
- 1. 1000
 - 2. 15000
 - 3. 10000
 - 4. 1500

Question ID : 264330103389
Option 1 ID : 264330405862
Option 2 ID : 264330405863
Option 3 ID : 264330405861
Option 4 ID : 264330405864
Status : Answered
Chosen Option : 2

Q.26 The following pie chart shows the number of students who failed in different subjects in an examination. Examine the chart and answer the following question. The total number of students who have failed is 350.



The number of students failed in mathematics is less than the number of students failed in all other subjects by:

- Ans
- 1. 190
 - 2. 256
 - 3. 95
 - 4. 161

Question ID : 264330165435
Option 1 ID : 264330648822
Option 2 ID : 264330648821
Option 3 ID : 264330648819
Option 4 ID : 264330648820
Status : Answered
Chosen Option : 4

Q.27 Simplify the following.

$$19 \div 5 \text{ of } (27 - \overline{15 - 21}) + 37$$

- Ans
- ✓ 1. $\frac{6124}{165}$
 - ✗ 2. $\frac{19}{165}$
 - ✗ 3. $\frac{6142}{165}$
 - ✗ 4. $\frac{37}{165}$

Question ID : 26433073053

Option 1 ID : 264330286406

Option 2 ID : 264330286405

Option 3 ID : 264330286404

Option 4 ID : 264330286407

Status : Answered

Chosen Option : 1

Q.28 The price of a stock increased by 30% in the first year and decreased by 20% in the second year. If an investor bought 100 shares of the stock for ₹1,000, then what is the final value of the investment after 2 years?

- Ans
- ✗ 1. ₹960
 - ✓ 2. ₹1,040
 - ✗ 3. ₹1,400
 - ✗ 4. ₹1,020

Question ID : 264330157709

Option 1 ID : 264330618198

Option 2 ID : 264330618197

Option 3 ID : 264330618196

Option 4 ID : 264330618195

Status : Answered

Chosen Option : 2

Q.29 The LCM of two numbers is 660 and their HCF is 5. If one of the numbers is 55, find the other.

- Ans
- ✗ 1. 275
 - ✗ 2. 12
 - ✗ 3. 110
 - ✓ 4. 60

Question ID : 264330102312

Option 1 ID : 264330401714

Option 2 ID : 264330401713

Option 3 ID : 264330401716

Option 4 ID : 264330401715

Status : Answered

Chosen Option : 4

Q.30 Some medicine in liquid form is prepared in a hemispherical container of diameter 36 cm. When the container is full of medicine, the medicine is transferred to small cylindrical bottles of diameter 6 cm and height 6 cm. How many bottles are required to empty the container?

- Ans
- 1. 76
 - 2. 72
 - 3. 70
 - 4. 75

Question ID : 264330145118
Option 1 ID : 264330568730
Option 2 ID : 264330568728
Option 3 ID : 264330568727
Option 4 ID : 264330568729
Status : Answered
Chosen Option : 2

Q.31 Tom can do a piece of work in 7 days, whereas Jay can do the same work in 14 days. How long will they take to finish the work if both work together?

- Ans
- 1. $5\frac{2}{3}$ days
 - 2. $4\frac{2}{3}$ days
 - 3. $7\frac{2}{3}$ days
 - 4. $2\frac{2}{3}$ days

Question ID : 264330102373
Option 1 ID : 264330401957
Option 2 ID : 264330401958
Option 3 ID : 264330401960
Option 4 ID : 264330401959
Status : Answered
Chosen Option : 2

Q.32 Two trains of lengths 200 m and 250 m are running on parallel rail tracks at speeds of 68 km/h and 50 km/h, respectively. In how much time (in seconds) will they cross each other if they are running in the same direction?

- Ans
- 1. 90
 - 2. 85
 - 3. 80
 - 4. 75

Question ID : 26433082986
Option 1 ID : 264330325780
Option 2 ID : 264330325779
Option 3 ID : 264330325778
Option 4 ID : 264330325777
Status : Answered
Chosen Option : 1

Q.33 Travelling a distance of 1000 km, a train slowed down due to repairs of the tracks. Its average speed for the trip reduced by 75 km/h and the time of travel increased by 3 hours. The original duration of the travel is:

- Ans
- 1. 6 hours
 - 2. 5 hours
 - 3. 5.5 hours
 - 4. 6.5 hours

Question ID : 264330104389

Option 1 ID : 264330409859

Option 2 ID : 264330409858

Option 3 ID : 264330409860

Option 4 ID : 264330409857

Status : Not Attempted and Marked For Review

Chosen Option : --

Q.34 $7 \sin^2 A + 3 \cos^2 A = 4$, then find $\cot A$:

- Ans
- 1. $\sqrt{3}$
 - 2. $\sqrt{2}$
 - 3. $\frac{1}{\sqrt{2}}$
 - 4. $\frac{1}{\sqrt{3}}$

Question ID : 264330158421

Option 1 ID : 264330621043

Option 2 ID : 264330621045

Option 3 ID : 264330621046

Option 4 ID : 264330621044

Status : Answered

Chosen Option : 1

Q.35 If $\sec A - \tan A = p$, then find the value of $\sec A$.

- Ans
- 1. $\frac{p^2 - 1}{p^2 + 1}$
 - 2. $\frac{p^2 + 1}{p^2 - 1}$
 - 3. $\frac{p^2 + 1}{p}$
 - 4. $\frac{p^2 + 1}{2p}$

Question ID : 264330157747

Option 1 ID : 264330618350

Option 2 ID : 264330618349

Option 3 ID : 264330618348

Option 4 ID : 264330618347

Status : Answered

Chosen Option : 4

Q.36 $2(\sin 1^\circ \times \sec 89^\circ) + 3(\cos 11^\circ \times \operatorname{cosec} 79^\circ) + 5(\tan 21^\circ \times \tan 69^\circ) = ?$

- Ans
- 1. 11
 - 2. 12
 - 3. 20
 - 4. 10

Question ID : 264330145124
Option 1 ID : 264330568753
Option 2 ID : 264330568751
Option 3 ID : 264330568752
Option 4 ID : 264330568754
Status : Answered
Chosen Option : 4

Q.37 A person has three iron bars whose lengths are 20, 30 and 40 metres, respectively. He wants to cut pieces of the same length from each of the three bars. What is the least number of total pieces if he cuts without any wastage?

- Ans
- 1. 8
 - 2. 10
 - 3. 9
 - 4. 11

Question ID : 26433063434
Option 1 ID : 264330248391
Option 2 ID : 264330248389
Option 3 ID : 264330248388
Option 4 ID : 264330248390
Status : Answered
Chosen Option : 2

Q.38 In a ΔPQR , $\angle P : \angle Q : \angle R = 3 : 4 : 8$. The shortest side and the longest side of the triangle, respectively, are:

- Ans
- 1. PQ and PR
 - 2. QR and PR
 - 3. PQ and QR
 - 4. QR and PQ

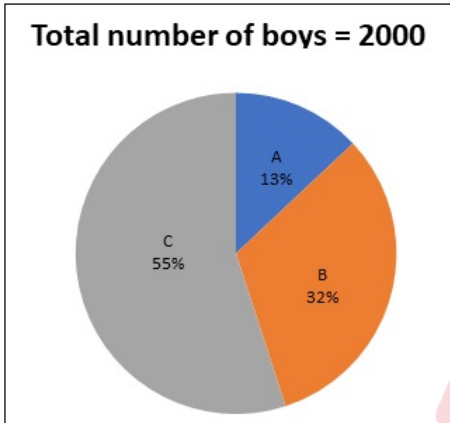
Question ID : 264330158284
Option 1 ID : 264330620496
Option 2 ID : 264330620498
Option 3 ID : 264330620495
Option 4 ID : 264330620497
Status : Answered
Chosen Option : 4

Q.39 In a triangle ABC, if $\angle B = 90^\circ$, $\angle C = 45^\circ$ and $AC = 4$ cm, then the value of BC is:

- Ans
- 1. $\sqrt{2}$ cm
 - 2. 4 cm
 - 3. $2\sqrt{2}$ cm
 - 4. $4\sqrt{2}$ cm

Question ID : 264330157741
Option 1 ID : 264330618326
Option 2 ID : 264330618325
Option 3 ID : 264330618324
Option 4 ID : 264330618323
Status : Answered
Chosen Option : 1

Q.40 Study the given pie-chart and answer the question that follows.
The pie-chart shows the number of boys studying in play group of various schools (A, B, C).



What is the average number of boys studying in schools A and C?

- Ans
- 1. 740
 - 2. 920
 - 3. 560
 - 4. 680

Question ID : 264330158278
Option 1 ID : 264330620472
Option 2 ID : 264330620471
Option 3 ID : 264330620474
Option 4 ID : 264330620473
Status : Answered
Chosen Option : 4

Q.41 In an office, 75 employees can finish a project in 60 days. After few days, 15 employees left the job and the project was completed in 65 days. After how many days did the 15 employees leave?

- Ans
- 1. 50
 - 2. 45
 - 3. 30
 - 4. 40

Question ID : 264330118107
Option 1 ID : 264330464245
Option 2 ID : 264330464244
Option 3 ID : 264330464246
Option 4 ID : 264330464243
Status : Answered
Chosen Option : 4

Q.42 Ramesh borrowed ₹15,000 at a certain rate of simple interest from a bank. He repaid (the principal but not interest) ₹6,000 after 5 years, and after 5 more years he paid ₹18,600 and settled his account. Find the rate of simple interest per annum.

- Ans
- 1. 12%
 - 2. 10%
 - 3. 8%
 - 4. 6%

Question ID : 264330169924
Option 1 ID : 264330666374
Option 2 ID : 264330666373
Option 3 ID : 264330666372
Option 4 ID : 264330666371
Status : Not Attempted and Marked For Review
Chosen Option : --

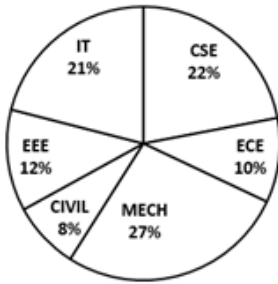
Q.43 Let ABC, PQR be two congruent triangles such that $\angle A = \angle P = 90^\circ$. If BC = 17 cm, PR = 8 cm, find AB (in cm).

- Ans
- 1. 12
 - 2. 15
 - 3. 14
 - 4. 9

Question ID : 264330157743
Option 1 ID : 264330618332
Option 2 ID : 264330618334
Option 3 ID : 264330618333
Option 4 ID : 264330618331
Status : Answered
Chosen Option : 2

Q.44 Study the pie-chart given below, and answer the question that follows.
Percentage-wise break up of students in terms of specialisation in BTech

TOTAL NUMBER OF STUDENTS = 6700



What is the total number of students having specialisation in CSE, ECE and CIVIL?

- Ans 1. 2680
 2. 2840
 3. 2860
 4. 2480

Question ID : 264330165433

Option 1 ID : 264330648813

Option 2 ID : 264330648814

Option 3 ID : 264330648812

Option 4 ID : 264330648811

Status : Answered

Chosen Option : 1

Q.45 The LCM and HCF of two numbers are 1105 and 5. If the LCM is 17 times the first number, then find the two numbers.

- Ans 1. 65 and 85
 2. 55 and 85
 3. 65 and 75
 4. 60 and 80

Question ID : 26433065039

Option 1 ID : 264330254748

Option 2 ID : 264330254750

Option 3 ID : 264330254749

Option 4 ID : 264330254751

Status : Answered

Chosen Option : 1

Q.46 Akshita and Raina are typing a book, but have only one laptop to work upon. They decided that they will work on alternate basis such that Akshita works for the first day, Raina works for the second day, Akshita for the third day and so on. Akshita alone can finish the typing work in 16 days, while Raina will take 24 days if she works alone on the entire book. How many days will they take to finish the typing work if they work on alternate basis?

- Ans 1. 15
 2. 18
 3. 19
 4. 17

Question ID : 26433082512

Option 1 ID : 264330323883

Option 2 ID : 264330323882

Option 3 ID : 264330323884

Option 4 ID : 264330323881

Status : **Not Attempted and Marked For Review**

Chosen Option : --

Q.47 A train covers a distance of 540 km between two stations in 240 minutes. It travels at a speed of 90 km/h to another station in 5 hours. What is the average speed of the train (in km/h)?

- Ans 1. 112
 2. 110
 3. 100
 4. 120

Question ID : 264330106345

Option 1 ID : 264330417681

Option 2 ID : 264330417684

Option 3 ID : 264330417682

Option 4 ID : 264330417683

Status : **Answered**

Chosen Option : 2

Q.48 The heights of two cones are in the ratio 7:5 and their diameters are in the ratio 10:21. What is the ratio of their volumes? (Where $\pi = \frac{22}{7}$)

- Ans 1. 26:47
 2. 14:19
 3. 20:63
 4. 17:21

Question ID : 264330104376

Option 1 ID : 264330409808

Option 2 ID : 264330409807

Option 3 ID : 264330409806

Option 4 ID : 264330409805

Status : **Answered**

Chosen Option : 3

Q.49 What is the difference between a single discount of 35% on ₹700 and two successive discounts of 18% and 12% on the same amount (correct to two places of decimals)?

- Ans
- 1. ₹51.20
 - 2. ₹50.12
 - 3. ₹52.10
 - 4. ₹49.80

Question ID : 264330165523

Option 1 ID : 264330649171

Option 2 ID : 264330649173

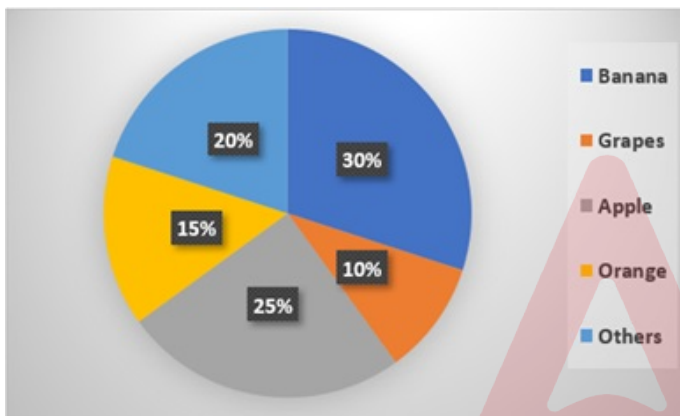
Option 3 ID : 264330649172

Option 4 ID : 264330649174

Status : Not Attempted and Marked For Review

Chosen Option : --

Q.50 Study the given pie-chart and answer the question that follows.
The pie-chart shows the sale of different fruits in a shop in a day.



If a total of 1200 kg of fruits were sold in a day, calculate the amount of bananas sold (in kg).

- Ans
- 1. 360
 - 2. 290
 - 3. 330
 - 4. 260

Question ID : 264330157737

Option 1 ID : 264330618310

Option 2 ID : 264330618308

Option 3 ID : 264330618309

Option 4 ID : 264330618307

Status : Answered

Chosen Option : 1

Q.1 Select the most appropriate ANTONYM of the given word.
Transparent

- Ans
- 1. Crossover
 - 2. Linger
 - 3. Opaque
 - 4. Oppress

Question ID : 264330164277
Option 1 ID : 264330644333
Option 2 ID : 264330644332
Option 3 ID : 264330644334
Option 4 ID : 264330644331
Status : Answered
Chosen Option : 3

Q.2 Select the most appropriate meaning of the underlined idiom.
The office management was in dire straits after the financial crash.

- Ans
- 1. To be extremely happy
 - 2. In a very bad situation
 - 3. Being direct or fair
 - 4. To walk on already trodden paths

Question ID : 264330120620
Option 1 ID : 264330472721
Option 2 ID : 264330472719
Option 3 ID : 264330472720
Option 4 ID : 264330472722
Status : Answered
Chosen Option : 2

Q.3 Select the INCORRECTLY spelt word.

- Ans
- 1. Puzzled
 - 2. Nasal
 - 3. Councel
 - 4. Embezzlement

Question ID : 26433089104
Option 1 ID : 264330349934
Option 2 ID : 264330349935
Option 3 ID : 264330349936
Option 4 ID : 264330349933
Status : Answered
Chosen Option : 3

Q.4 Select the option that can be used as a one-word substitute for the given group of words.

Lasting for a very short time

- Ans** 1. Eternal
 2. Ephemeral
 3. Blasphemy
 4. Chronology

Question ID : 26433091809
Option 1 ID : 264330360575
Option 2 ID : 264330360576
Option 3 ID : 264330360573
Option 4 ID : 264330360574
Status : Answered
Chosen Option : 2

Q.5 Select the most appropriate idiom that can substitute the underlined segment in the given sentence.

Do you believe that you have a possibility of getting that job?

- Ans** 1. spill the beans
 2. snow job
 3. stand a chance
 4. shoot the breeze

Question ID : 264330117475
Option 1 ID : 264330461931
Option 2 ID : 264330461932
Option 3 ID : 264330461930
Option 4 ID : 264330461929
Status : Answered
Chosen Option : 3

Q.6 Select the most appropriate synonym of the given word.

Aggravate

- Ans** 1. Annoy
 2. Mitigate
 3. Enhance
 4. Satisfy

Question ID : 264330163332
Option 1 ID : 264330640630
Option 2 ID : 264330640628
Option 3 ID : 264330640629
Option 4 ID : 264330640627
Status : Answered
Chosen Option : 3

Q.7 Choose the idiom that can best substitute the underlined part of the given sentence.

Shelley ignored her father's wish of studying arts and instead took admission in commerce.

- Ans
- 1. Blew over
 - 2. Big fish
 - 3. Bid defiance to
 - 4. Beyond the pale

Question ID : 26433094748
Option 1 ID : 264330371827
Option 2 ID : 264330371825
Option 3 ID : 264330371828
Option 4 ID : 264330371826
Status : Answered
Chosen Option : 3

Q.8 Select the most appropriate meaning of the given idiom.

Get your act together

- Ans
- 1. To ruin one's plans
 - 2. To organise yourself so that you can do something properly
 - 3. To get the conversation going
 - 4. To understand something complicated

Question ID : 264330163401
Option 1 ID : 264330640883
Option 2 ID : 264330640885
Option 3 ID : 264330640886
Option 4 ID : 264330640884
Status : Answered
Chosen Option : 2

Q.9 Identify from the given options the word most similar in meaning to the underlined word according to its meaning in the following sentence.
He is a person who holds old fashioned opinions.

- Ans
- 1. obsolete
 - 2. ancient
 - 3. antique
 - 4. senior citizen

Question ID : 264330101442
Option 1 ID : 264330398279
Option 2 ID : 264330398277
Option 3 ID : 264330398278
Option 4 ID : 264330398280
Status : Answered
Chosen Option : 1

Q.10 Select the most appropriate option that can substitute the underlined words in the given sentence.

Kiran's teacher was doubtful on her success.

- Ans
- 1. doubtful beyond
 - 2. doubtful in
 - 3. doubtful off
 - 4. doubtful of

Question ID : 26433099936
Option 1 ID : 264330392319
Option 2 ID : 264330392318
Option 3 ID : 264330392320
Option 4 ID : 264330392317
Status : Answered
Chosen Option : 4

Q.11 Select the correct spelling for the INCORRECTLY spelt word in the given sentence.

The Eustachian tube and vestibular complex in the middle and inner ear, respectively, have an important role to play.

- Ans
- 1. vestibular
 - 2. midle
 - 3. respictevely
 - 4. imporent

Question ID : 26433090499
Option 1 ID : 264330355445
Option 2 ID : 264330355446
Option 3 ID : 264330355447
Option 4 ID : 264330355448
Status : Answered
Chosen Option : 1

Q.12 Select the most appropriate idiom to fill in the blank.

There are others waiting to grab an opportunity; if you don't act fast, you are going to _____.

- Ans
- 1. be in the same boat
 - 2. a full boat
 - 3. push the boat out
 - 4. miss the boat

Question ID : 264330163335
Option 1 ID : 264330640639
Option 2 ID : 264330640642
Option 3 ID : 264330640640
Option 4 ID : 264330640641
Status : Answered
Chosen Option : 4

Q.13 The following sentence has been split into four segments. Identify the segment that contains a grammatical error.
Mr. Khanna and family / have visit / Manali during / the summer vacation.

- Ans 1. have visit
 2. Mr. Khanna and family
 3. the summer vacation.
 4. Manali during

Question ID : 26433059759
Option 1 ID : 264330233869
Option 2 ID : 264330233868
Option 3 ID : 264330233871
Option 4 ID : 264330233870
Status : Answered
Chosen Option : 1

Q.14 Select the most appropriate idiom for the given situation.

He started with an online company and became a millionaire. Then, he sold it and invested in the share market and earned more money. Now, he has invested in the transportation industry and is generating huge wealth. What does he have?

- Ans 1. As genuine as a three-dollar bill
 2. Midas touch
 3. Rule of thumb
 4. Sticky fingers

Question ID : 26433093038
Option 1 ID : 264330365406
Option 2 ID : 264330365407
Option 3 ID : 264330365408
Option 4 ID : 264330365405
Status : Answered
Chosen Option : 2

Q.15 The following sentence has been divided into parts. One of them may contain an error. Select the part that contains the error from the given options. If you don't find any error, mark 'No error' as your answer.

There was no other book / in the English language / which is as interesting as this one.

- Ans 1. There was no other book
 2. in the English language
 3. No error
 4. which is as interesting as this one

Question ID : 264330120599
Option 1 ID : 264330472635
Option 2 ID : 264330472636
Option 3 ID : 264330472638
Option 4 ID : 264330472637
Status : Answered
Chosen Option : 1

Q.16 Select the option that can be used as a one-word substitute for the given group of words.

Very attractive and easy to feel love for

- Ans 1. Flamboyant
 2. Adorable
 3. Mysterious
 4. Laudable

Question ID : 26433088194
Option 1 ID : 264330346369
Option 2 ID : 264330346371
Option 3 ID : 264330346372
Option 4 ID : 264330346370
Status : Answered
Chosen Option : 2

Q.17 Select the most appropriate meaning of the underlined word.
He uses one of the finest ingredients in his cooking.

- Ans 1. Components
 2. Mixtures
 3. Culinary
 4. Preparations

Question ID : 264330121040
Option 1 ID : 264330474367
Option 2 ID : 264330474368
Option 3 ID : 264330474370
Option 4 ID : 264330474369
Status : Answered
Chosen Option : 1

Q.18 Select the most appropriate ANTONYM of the given word.

Abhor

- Ans 1. Occupy
 2. Despise
 3. Danger
 4. Love

Question ID : 264330163376
Option 1 ID : 264330640794
Option 2 ID : 264330640791
Option 3 ID : 264330640792
Option 4 ID : 264330640793
Status : Answered
Chosen Option : 4

Q.19 Select the option that can be used as a one-word substitute for the underlined words.

He was not willing to attend the technical session of the conference.

- Ans
- 1. dejecting
 - 2. reluctant
 - 3. curious
 - 4. comprehensive

Question ID : 26433099922
Option 1 ID : 264330392269
Option 2 ID : 264330392270
Option 3 ID : 264330392272
Option 4 ID : 264330392271
Status : Answered
Chosen Option : 2

Q.20 Select the option that can be used as a one-word substitute for the given group of words.

A disease prevalent in a community or a specific region at a specific time, affecting a large area.

- Ans
- 1. Pandemic
 - 2. Eradicate
 - 3. Epidemic
 - 4. Endemic

Question ID : 26433088805
Option 1 ID : 264330348774
Option 2 ID : 264330348776
Option 3 ID : 264330348775
Option 4 ID : 264330348773
Status : Answered
Chosen Option : 3

Q.21 Select the most appropriate ANTONYM of the given word.

Apex

- Ans
- 1. Pinnacle
 - 2. Bottom
 - 3. Farthest
 - 4. Watchful

Question ID : 264330163397
Option 1 ID : 264330640867
Option 2 ID : 264330640869
Option 3 ID : 264330640868
Option 4 ID : 264330640870
Status : Answered
Chosen Option : 2

Q.22 Select the most appropriate meaning of the underlined word.
Ram was abandoned by his parents at a very early age.

- Ans
- 1. Loved
 - 2. Left
 - 3. Hated
 - 4. Disgraced

Question ID : 264330121035
Option 1 ID : 264330474349
Option 2 ID : 264330474347
Option 3 ID : 264330474348
Option 4 ID : 264330474350
Status : Answered
Chosen Option : 2

Q.23 Select the most appropriate meaning of the given idiom.

Part and parcel

- Ans
- 1. Passing blame to someone else
 - 2. Agreement with someone
 - 3. A payment system for parcels
 - 4. Basic or essential element

Question ID : 26433091884
Option 1 ID : 264330360874
Option 2 ID : 264330360875
Option 3 ID : 264330360873
Option 4 ID : 264330360876
Status : Answered
Chosen Option : 4

Q.24 Choose the most appropriate meaning of the underlined phrase.
What we need is skilled and energetic planning and elbow grease.

- Ans
- 1. The grease that is earned through labour
 - 2. Hard work that one puts into cleaning one's elbow
 - 3. Hard work that one puts into removing grease
 - 4. Hard work that one puts into doing something

Question ID : 264330137457
Option 1 ID : 264330538453
Option 2 ID : 264330538452
Option 3 ID : 264330538451
Option 4 ID : 264330538454
Status : Answered
Chosen Option : 4

Q.25 Select the most appropriate synonym of the given word.

Robe

- Ans
- 1. Robbery
 - 2. Mishap
 - 3. Success
 - 4. Cloak

Question ID : 264330163358

Option 1 ID : 264330640723

Option 2 ID : 264330640725

Option 3 ID : 264330640726

Option 4 ID : 264330640724

Status : Not Attempted and
Marked For Review

Chosen Option : --

Q.26 Select the most appropriate meaning of the given idiom.
A snowball effect

- Ans
- 1. An accelerating growth of magnitude
 - 2. Trick someone completely
 - 3. Cold and uncomfortable
 - 4. Slow movement

Question ID : 264330117376

Option 1 ID : 264330461548

Option 2 ID : 264330461547

Option 3 ID : 264330461545

Option 4 ID : 264330461546

Status : Not Attempted and
Marked For Review

Chosen Option : --

Q.27 Some words in the following sentence have been underlined and given as options.
Select the option that contains a spelling error.

Roshni does a fabulouous job at her company and has been offered a promotion.

- Ans
- 1. fabulouous
 - 2. company
 - 3. promotion
 - 4. offered

Question ID : 264330121268

Option 1 ID : 264330475275

Option 2 ID : 264330475276

Option 3 ID : 264330475278

Option 4 ID : 264330475277

Status : Answered

Chosen Option : 1

Q.28 The following sentence has been split into four segments. Identify the segment that contains a grammatical error.

I have never / come to / such a kind person / like my friend.

- Ans
- 1. such a kind person
 - 2. like my friend
 - 3. come to
 - 4. I have never

Question ID : 26433070491
Option 1 ID : 264330276442
Option 2 ID : 264330276443
Option 3 ID : 264330276441
Option 4 ID : 264330276440
Status : Answered
Chosen Option : 3

Q.29 Select the most appropriate option that can substitute the underlined word in the given sentence.

The Board of Film Analysts vituperated the novice Indonesian film-maker and cancelled its nomination for the 'Golden Globe Award'.

- Ans
- 1. lamented the untimely death of
 - 2. censured with harsh and abusive language
 - 3. dealt in a delicate and polite manner
 - 4. recognised and praised the talent of

Question ID : 26433070504
Option 1 ID : 264330276493
Option 2 ID : 264330276494
Option 3 ID : 264330276495
Option 4 ID : 264330276492
Status : Answered
Chosen Option : 2

Q.30 Select the most appropriate idiom to substitute the underlined segment in the given sentence.

My final round of Spell Bee Competition is coming up and to win this event, I need to study hard from today.

- Ans
- 1. burn the books
 - 2. hit the books
 - 3. cut to the chase
 - 4. pour my heart out

Question ID : 264330135908
Option 1 ID : 264330532487
Option 2 ID : 264330532488
Option 3 ID : 264330532489
Option 4 ID : 264330532490
Status : Answered
Chosen Option : 2

Q.31 Select the option that can be used as a one-word substitute for the given group of words.

To have a strong emotional effect on.

- Ans 1. To forfeit
 2. To overwhelm
 3. To smother
 4. To yield

Question ID : 26433088971
Option 1 ID : 264330349424
Option 2 ID : 264330349423
Option 3 ID : 264330349421
Option 4 ID : 264330349422
Status : Answered
Chosen Option : 2

Q.32 Select the INCORRECTLY spelt word.

- Ans 1. Ocassion
 2. Agreeable
 3. Formulae
 4. Waitress

Question ID : 264330163411
Option 1 ID : 264330640924
Option 2 ID : 264330640925
Option 3 ID : 264330640926
Option 4 ID : 264330640923
Status : Answered
Chosen Option : 2

Q.33 Select the most appropriate option that can substitute the underlined segment in the given sentence. If there is no need to substitute it, select 'No substitution required'.
Harry is the one sitting on the corner.

- Ans 1. No substitution required
 2. upon
 3. onto
 4. in

Question ID : 26433070769
Option 1 ID : 264330277535
Option 2 ID : 264330277533
Option 3 ID : 264330277534
Option 4 ID : 264330277532
Status : Answered
Chosen Option : 4

Q.34 Select the INCORRECTLY spelt word from the underlined words in the following sentence.

Communities must build their resileince, including adopting appropriate technologies while making the most of traditional knowledge, and diversifying their livelihoods to cope with current and future climate stress.

- Ans
- 1. livelihoods
 - 2. diversifying
 - 3. appropriate
 - 4. resileince

Question ID : 264330141159
Option 1 ID : 264330552982
Option 2 ID : 264330552981
Option 3 ID : 264330552980
Option 4 ID : 264330552979
Status : Answered
Chosen Option : 4

Q.35 The following sentence has been split into four segments. Identify the segment that contains a grammatical error.

The university has putting off / the semester examination / for the second time now / due to technical issues.

- Ans
- 1. the semester examination
 - 2. due to technical issues
 - 3. for the second time now
 - 4. The university has putting off

Question ID : 264330145278
Option 1 ID : 264330569368
Option 2 ID : 264330569370
Option 3 ID : 264330569369
Option 4 ID : 264330569367
Status : Answered
Chosen Option : 4

Q.36 Select the correct option to substitute the underlined segment in the given sentence. If no substitution is required, select 'No substitution'.

Her smile is similar to her mother.

- Ans
- 1. No substitution
 - 2. her mother's
 - 3. mother
 - 4. the mother

Question ID : 26433090821
Option 1 ID : 264330356708
Option 2 ID : 264330356705
Option 3 ID : 264330356707
Option 4 ID : 264330356706
Status : Answered
Chosen Option : 2

Q.37 Select the most appropriate ANTONYM of the given word.

Inquisitive

- Ans
- 1. Careful
 - 2. Dull
 - 3. Uninterested
 - 4. Indolent

Question ID : 264330120606

Option 1 ID : 264330472666

Option 2 ID : 264330472664

Option 3 ID : 264330472663

Option 4 ID : 264330472665

Status : Answered

Chosen Option : 3

Q.38 Parts of the following sentence have been given as options. One of them may contain an error. Select the part that contains the error from the given options. If you don't find any error, mark 'No error' as your answer.
Anant was telling a story about his most recent exploits when a tree branch break the living room window.

- Ans
- 1. about his most recent exploits
 - 2. when a tree branch break the living room window
 - 3. Anant was telling a story
 - 4. No error

Question ID : 26433092136

Option 1 ID : 264330361858

Option 2 ID : 264330361859

Option 3 ID : 264330361857

Option 4 ID : 264330361860

Status : Answered

Chosen Option : 2

Q.39 Select the option that can be used as a one-word substitute for the given group of words.

An animal or a person that eats all types of food, especially plants and meat

- Ans
- 1. Vegetarian
 - 2. Herbivore
 - 3. Omnivore
 - 4. Carnivore

Question ID : 26433088198

Option 1 ID : 264330346385

Option 2 ID : 264330346388

Option 3 ID : 264330346386

Option 4 ID : 264330346387

Status : Answered

Chosen Option : 3

Q.40 Select the most appropriate ANTONYM of the given word.

Bombastic

- Ans** 1. Essential
 2. Sarcastic
 3. Plain
 4. Rhythmic

Question ID : 264330163399

Option 1 ID : 264330640877

Option 2 ID : 264330640876

Option 3 ID : 264330640875

Option 4 ID : 264330640878

Status : Answered

Chosen Option : 3

Comprehension:

In the following passage some words have been deleted. Read the passage carefully and select the most appropriate option to fill in each blank.

Among the largest species of cats in the world, tigers are powerful hunters with (1) _____ teeth, strong jaws and agile bodies. They range across Asia from Russia all the way to Sumatra and mainland Southeast Asia. Researchers still have much to learn (2) _____ these beautiful, endangered (3) _____.

There is currently one recognized species of tiger, *Panthera tigris*. Scientists have further (4) _____ the tiger into nine subspecies: the extinct Bali, Caspian and Javan subspecies, and the living Malayan, Sumatran, South China, Indochinese, Bengal and Amur (or Siberian) subspecies. Of these six subspecies, AZA-accredited zoos currently manage three: Amur, Malayan, and Sumatran. The Smithsonian's National Zoo and Conservation Biology Institute is home to Sumatran and Amur tigers; Sumatran tigers are (5) _____ as Critically Endangered on the International Union for Conservation of Nature's Red List, and Amur tigers have been classified as Endangered.

SubQuestion No : 41

Q.41 Select the most appropriate option to fill blank number 1.

- Ans** 1. Long
 2. Small
 3. Blunt
 4. Sharp

Question ID : 264330163389

Option 1 ID : 264330640837

Option 2 ID : 264330640835

Option 3 ID : 264330640836

Option 4 ID : 264330640838

Status : Answered

Chosen Option : 4

Comprehension:

In the following passage some words have been deleted. Read the passage carefully and select the most appropriate option to fill in each blank.

Among the largest species of cats in the world, tigers are powerful hunters with (1) _____ teeth, strong jaws and agile bodies. They range across Asia from Russia all the way to Sumatra and mainland Southeast Asia. Researchers still have much to learn (2) _____ these beautiful, endangered (3) _____.

There is currently one recognized species of tiger, *Panthera tigris*. Scientists have further (4) _____ the tiger into nine subspecies: the extinct Bali, Caspian and Javan subspecies, and the living Malayan, Sumatran, South China, Indochinese, Bengal and Amur (or Siberian) subspecies. Of these six subspecies, AZA-accredited zoos currently manage three: Amur, Malayan, and Sumatran. The Smithsonian's National Zoo and Conservation Biology Institute is home to Sumatran and Amur tigers; Sumatran tigers are (5) _____ as Critically Endangered on the International Union for Conservation of Nature's Red List, and Amur tigers have been classified as Endangered.

SubQuestion No : 42

Q.42 Select the most appropriate option to fill blank number 2.

- Ans 1. With
 2. Into
 3. About
 4. Along

Question ID : 264330163390

Option 1 ID : 264330640839

Option 2 ID : 264330640842

Option 3 ID : 264330640841

Option 4 ID : 264330640840

Status : Answered

Chosen Option : 3

Comprehension:

In the following passage some words have been deleted. Read the passage carefully and select the most appropriate option to fill in each blank.

Among the largest species of cats in the world, tigers are powerful hunters with (1) _____ teeth, strong jaws and agile bodies. They range across Asia from Russia all the way to Sumatra and mainland Southeast Asia. Researchers still have much to learn (2) _____ these beautiful, endangered (3) _____.

There is currently one recognized species of tiger, *Panthera tigris*. Scientists have further (4) _____ the tiger into nine subspecies: the extinct Bali, Caspian and Javan subspecies, and the living Malayan, Sumatran, South China, Indochinese, Bengal and Amur (or Siberian) subspecies. Of these six subspecies, AZA-accredited zoos currently manage three: Amur, Malayan, and Sumatran. The Smithsonian's National Zoo and Conservation Biology Institute is home to Sumatran and Amur tigers; Sumatran tigers are (5) _____ as Critically Endangered on the International Union for Conservation of Nature's Red List, and Amur tigers have been classified as Endangered.

SubQuestion No : 43

Q.43 Select the most appropriate option to fill blank number 3.

- Ans 1. Rabbits
 2. Cats
 3. Elephants
 4. Dogs

Question ID : 264330163391

Option 1 ID : 264330640845

Option 2 ID : 264330640843

Option 3 ID : 264330640846

Option 4 ID : 264330640844

Status : Answered

Chosen Option : 2

Comprehension:

In the following passage some words have been deleted. Read the passage carefully and select the most appropriate option to fill in each blank.

Among the largest species of cats in the world, tigers are powerful hunters with (1) _____ teeth, strong jaws and agile bodies. They range across Asia from Russia all the way to Sumatra and mainland Southeast Asia. Researchers still have much to learn (2) _____ these beautiful, endangered (3) _____. There is currently one recognized species of tiger, *Panthera tigris*. Scientists have further (4) _____ the tiger into nine subspecies: the extinct Bali, Caspian and Javan subspecies, and the living Malayan, Sumatran, South China, Indochinese, Bengal and Amur (or Siberian) subspecies. Of these six subspecies, AZA-accredited zoos currently manage three: Amur, Malayan, and Sumatran. The Smithsonian's National Zoo and Conservation Biology Institute is home to Sumatran and Amur tigers; Sumatran tigers are (5) _____ as Critically Endangered on the International Union for Conservation of Nature's Red List, and Amur tigers have been classified as Endangered.

SubQuestion No : 44

Q.44 Select the most appropriate option to fill blank number 4.

- Ans 1. Declared
 2. Restricted
 3. Generalized
 4. Classified

Question ID : 264330163392
Option 1 ID : 264330640849
Option 2 ID : 264330640848
Option 3 ID : 264330640850
Option 4 ID : 264330640847
Status : Answered
Chosen Option : 4

Comprehension:

In the following passage some words have been deleted. Read the passage carefully and select the most appropriate option to fill in each blank.

Among the largest species of cats in the world, tigers are powerful hunters with (1) _____ teeth, strong jaws and agile bodies. They range across Asia from Russia all the way to Sumatra and mainland Southeast Asia. Researchers still have much to learn (2) _____ these beautiful, endangered (3) _____. There is currently one recognized species of tiger, *Panthera tigris*. Scientists have further (4) _____ the tiger into nine subspecies: the extinct Bali, Caspian and Javan subspecies, and the living Malayan, Sumatran, South China, Indochinese, Bengal and Amur (or Siberian) subspecies. Of these six subspecies, AZA-accredited zoos currently manage three: Amur, Malayan, and Sumatran. The Smithsonian's National Zoo and Conservation Biology Institute is home to Sumatran and Amur tigers; Sumatran tigers are (5) _____ as Critically Endangered on the International Union for Conservation of Nature's Red List, and Amur tigers have been classified as Endangered.

SubQuestion No : 45

Q.45 Select the most appropriate option to fill blank number 5.

- Ans 1. Numerated
 2. Detailed
 3. Recorded
 4. Listed

Question ID : 264330163393
Option 1 ID : 264330640854
Option 2 ID : 264330640853
Option 3 ID : 264330640851
Option 4 ID : 264330640852
Status : Answered
Chosen Option : 4

Comprehension:

Read the given passage and answer the questions that follow.

What if globally designed products could radically change how we work, produce and consume? Several examples across continents show the way we are producing and consuming goods could be improved by relying on globally shared digital resources, such as design, knowledge and software.

Imagine a prosthetic hand designed by geographically dispersed communities of scientists, designers and enthusiasts in a collaborative manner via the web. All knowledge and software related to the hand is shared globally as a digital commons.

People from all over the world who are connected online and have access to local manufacturing machines (from 3D printing and CNC machines to low-tech crafts and tools) can, ideally with the help of an expert, manufacture a customised hand. This is the case of the Open Bionics project, which produces designs for robotic and bionic devices.

There are no patent costs to pay for. Less transportation of materials is needed, since a considerable part of the manufacturing takes place locally; maintenance is easier, products are designed to last as long as possible, and costs are thus much lower.

SubQuestion No : 46

Q.46 Identify the most suitable title for the given passage.

- Ans
- 1. Knowledge Explosion
 - 2. Customised Hand
 - 3. Shared Information
 - 4. Digital Globalisation

Question ID : 264330136482

Option 1 ID : 264330534678

Option 2 ID : 264330534676

Option 3 ID : 264330534675

Option 4 ID : 264330534677

Status : Answered

Chosen Option : 3

Comprehension:

Read the given passage and answer the questions that follow.

What if globally designed products could radically change how we work, produce and consume? Several examples across continents show the way we are producing and consuming goods could be improved by relying on globally shared digital resources, such as design, knowledge and software.

Imagine a prosthetic hand designed by geographically dispersed communities of scientists, designers and enthusiasts in a collaborative manner via the web. All knowledge and software related to the hand is shared globally as a digital commons.

People from all over the world who are connected online and have access to local manufacturing machines (from 3D printing and CNC machines to low-tech crafts and tools) can, ideally with the help of an expert, manufacture a customised hand. This is the case of the Open Bionics project, which produces designs for robotic and bionic devices.

There are no patent costs to pay for. Less transportation of materials is needed, since a considerable part of the manufacturing takes place locally; maintenance is easier, products are designed to last as long as possible, and costs are thus much lower.

SubQuestion No : 47

Q.47 What is the term used in the passage for globally shared digital things?

- Ans
- 1. Digital commons
 - 2. Digital information
 - 3. Digital resources
 - 4. Digital world

Question ID : 264330136479

Option 1 ID : 264330534666

Option 2 ID : 264330534664

Option 3 ID : 264330534663

Option 4 ID : 264330534665

Status : Answered

Chosen Option : 3

Comprehension:

Read the given passage and answer the questions that follow.

What if globally designed products could radically change how we work, produce and consume? Several examples across continents show the way we are producing and consuming goods could be improved by relying on globally shared digital resources, such as design, knowledge and software.

Imagine a prosthetic hand designed by geographically dispersed communities of scientists, designers and enthusiasts in a collaborative manner via the web. All knowledge and software related to the hand is shared globally as a digital commons.

People from all over the world who are connected online and have access to local manufacturing machines (from 3D printing and CNC machines to low-tech crafts and tools) can, ideally with the help of an expert, manufacture a customised hand. This is the case of the Open Bionics project, which produces designs for robotic and bionic devices.

There are no patent costs to pay for. Less transportation of materials is needed, since a considerable part of the manufacturing takes place locally; maintenance is easier, products are designed to last as long as possible, and costs are thus much lower.

SubQuestion No : 48**Q.48 What is the tone of the author?****Ans** ✓ 1. Speculative

✗ 2. Caustic

✗ 3. Acerbic

✗ 4. Belligerent

Question ID : 264330136481

Option 1 ID : 264330534674

Option 2 ID : 264330534673

Option 3 ID : 264330534671

Option 4 ID : 264330534672

Status : Answered

Chosen Option : 1

Comprehension:

Read the given passage and answer the questions that follow.

What if globally designed products could radically change how we work, produce and consume? Several examples across continents show the way we are producing and consuming goods could be improved by relying on globally shared digital resources, such as design, knowledge and software.

Imagine a prosthetic hand designed by geographically dispersed communities of scientists, designers and enthusiasts in a collaborative manner via the web. All knowledge and software related to the hand is shared globally as a digital commons.

People from all over the world who are connected online and have access to local manufacturing machines (from 3D printing and CNC machines to low-tech crafts and tools) can, ideally with the help of an expert, manufacture a customised hand. This is the case of the Open Bionics project, which produces designs for robotic and bionic devices.

There are no patent costs to pay for. Less transportation of materials is needed, since a considerable part of the manufacturing takes place locally; maintenance is easier, products are designed to last as long as possible, and costs are thus much lower.

SubQuestion No : 49**Q.49 Which of the following is NOT a globally shared digital resource?****Ans** ✗ 1. Knowledge

✗ 2. Design

✓ 3. Automobile

✗ 4. Software

Question ID : 264330136478

Option 1 ID : 264330534659

Option 2 ID : 264330534660

Option 3 ID : 264330534661

Option 4 ID : 264330534662

Status : Answered

Chosen Option : 3

Comprehension:

Read the given passage and answer the questions that follow.

What if globally designed products could radically change how we work, produce and consume? Several examples across continents show the way we are producing and consuming goods could be improved by relying on globally shared digital resources, such as design, knowledge and software.

Imagine a prosthetic hand designed by geographically dispersed communities of scientists, designers and enthusiasts in a collaborative manner via the web. All knowledge and software related to the hand is shared globally as a digital commons.

People from all over the world who are connected online and have access to local manufacturing machines (from 3D printing and CNC machines to low-tech crafts and tools) can, ideally with the help of an expert, manufacture a customised hand. This is the case of the Open Bionics project, which produces designs for robotic and bionic devices.

There are no patent costs to pay for. Less transportation of materials is needed, since a considerable part of the manufacturing takes place locally; maintenance is easier, products are designed to last as long as possible, and costs are thus much lower.

SubQuestion No : 50

Q.50 Select the most suitable word from the passage which means 'scattered'.

Ans 1. Collaborative

2. Shared

3. Customised

4. Dispersed

Question ID : 264330136480

Option 1 ID : 264330534669

Option 2 ID : 264330534667

Option 3 ID : 264330534670

Option 4 ID : 264330534668

Status : Answered

Chosen Option : 4

Adda247