

Delhi Police Constable Question Papers with Official Answer Key

Exam Date: November/ December 2023

Total Shifts: 45

Medium: English

Adda247

Constable Executive Male and Female in Delhi Police Examination 2023

Roll Number	
Candidate Name	
Venue Name	iON Digital Zone iDZ 2 Sector 62
Exam Date	14/11/2023
Exam Time	9:00 AM - 10:30 AM
Subject	Constable Executive Male and Female in Delhi Police Examination 2023

Section : **General Knowledge**

Q.1 When is Maha Shivaratri celebrated according to the Drik Panchang?

- Ans 1. Magha, Krishna Paksha, Chaturdashi
 2. Ashadh, Krishna Paksha, Trayodashi
 3. Phalguna, Shukla Paksha, Ekadashi
 4. Chaitra, Shukla Paksha, Ekam

Question ID : 264330110462

Option 1 ID : 264330434127

Option 2 ID : 264330434128

Option 3 ID : 264330434126

Option 4 ID : 264330434125

Status : **Not Attempted and Marked For Review**

Chosen Option : --

Q.2 Which of the following Indian Olympians has written the autobiography titled 'Playing to Win'?

- Ans 1. Abhinav Bindra
 2. Saina Nehwal
 3. Lovlina Borgohain
 4. Karnam Malleswari

Question ID : 26433066677

Option 1 ID : 264330261234

Option 2 ID : 264330261235

Option 3 ID : 264330261233

Option 4 ID : 264330261232

Status : **Answered**

Chosen Option : 2

Q.3 Which of the following is/are the goals of five year plans?

- Ans 1. Growth, Modernisation, and Equity only
 2. Growth only
 3. Growth, and Abolition of intermediaries
 4. Growth, Modernisation, Equity and Self-reliance

Question ID : 264330117742

Option 1 ID : 264330462783

Option 2 ID : 264330462784

Option 3 ID : 264330462786

Option 4 ID : 264330462785

Status : **Answered**

Chosen Option : 4

Q.4 Which of the following cultural festivals is organised by the Uttar Pradesh tourism department?

- Ans 1. Taj Mahotsav
 2. Hampi Dance Utsav
 3. Natyanjali Utsav
 4. Nishagandhi Festival

Question ID : 264330141780
Option 1 ID : 264330555441
Option 2 ID : 264330555439
Option 3 ID : 264330555442
Option 4 ID : 264330555440
Status : Answered
Chosen Option : 1

Q.5 Who among the following was the Prime Minister when the Globalisation Policy as part of 'New Economic Policy' was introduced?

- Ans 1. Manmohan Singh
 2. PV Narasimha Rao
 3. Narendra Modi
 4. Atal Bihari Vajpayee

Question ID : 264330111577
Option 1 ID : 264330438395
Option 2 ID : 264330438396
Option 3 ID : 264330438394
Option 4 ID : 264330438393
Status : Answered
Chosen Option : 2

Q.6 Which Article of the Indian Constitution deals with the Governor's assent to Bills?

- Ans 1. Article 201
 2. Article 164
 3. Article 264
 4. Article 200

Question ID : 26433089974
Option 1 ID : 264330353375
Option 2 ID : 264330353373
Option 3 ID : 264330353374
Option 4 ID : 264330353376
Status : Marked For Review
Chosen Option : 3

Q.7 Which part of the food is defecated?

- Ans 1. Vitamins in food
 2. Glucose in food
 3. Nutrients in food
 4. Unused food

Question ID : 264330118272
Option 1 ID : 264330464904
Option 2 ID : 264330464906
Option 3 ID : 264330464903
Option 4 ID : 264330464905
Status : Answered
Chosen Option : 4

Q.8 Who summons each house of State Legislature to meet from time to time?

- Ans
- 1. Deputy Speaker
 - 2. Chief Minister
 - 3. Governor
 - 4. Speaker

Question ID : 264330173545
Option 1 ID : 264330680662
Option 2 ID : 264330680660
Option 3 ID : 264330680659
Option 4 ID : 264330680661
Status : Answered
Chosen Option : 3

Q.9 Who among the following performed religious rituals for the king during the Vedic period?

- Ans
- 1. Vrajpati
 - 2. Purohita
 - 3. Gramani
 - 4. Senani

Question ID : 264330120235
Option 1 ID : 264330471195
Option 2 ID : 264330471196
Option 3 ID : 264330471197
Option 4 ID : 264330471198
Status : Answered
Chosen Option : 2

Q.10 National Waterways 10 (NW-10) is located in which state?

- Ans
- 1. Kerala
 - 2. West Bengal
 - 3. Tamil Nadu
 - 4. Maharashtra

Question ID : 264330119887
Option 1 ID : 264330469823
Option 2 ID : 264330469825
Option 3 ID : 264330469824
Option 4 ID : 264330469826
Status : Not Attempted and Marked For Review
Chosen Option : --

Q.11 Which of the following pairs is INCORRECT?

- Ans
- 1. Non-ferrous metal – Zinc
 - 2. Precious metal – Platinum
 - 3. Ferrous metal – Iron
 - 4. Non-metal – Lead

Question ID : 264330116378
Option 1 ID : 264330457599
Option 2 ID : 264330457597
Option 3 ID : 264330457598
Option 4 ID : 264330457600
Status : Answered
Chosen Option : 1

Q.12 In which of the following years was the Rowlatt Act passed to suppress the political violence?

- Ans 1. 1919
 2. 1915
 3. 1921
 4. 1924

Question ID : 264330118598
Option 1 ID : 264330465646
Option 2 ID : 264330465645
Option 3 ID : 264330465644
Option 4 ID : 264330465643
Status : Answered
Chosen Option : 1

Q.13 Ustad Allah Rakha, Sabir Khan, Pandit Kishan Maharaj and Pandit Jnan Prakash Ghosh are associated with which musical instrument?

- Ans 1. Shehnai
 2. Tabla
 3. Mridangam
 4. Violin

Question ID : 264330111187
Option 1 ID : 264330436834
Option 2 ID : 264330436835
Option 3 ID : 264330436833
Option 4 ID : 264330436836
Status : Answered
Chosen Option : 2

Q.14 Which of the given monuments is NOT located in Karnataka?

- Ans 1. Kittur Fort
 2. Hoysaleswara Temple
 3. Gol Gumbaz
 4. Palakkad Fort

Question ID : 264330165328
Option 1 ID : 264330648391
Option 2 ID : 264330648393
Option 3 ID : 264330648392
Option 4 ID : 264330648394
Status : Answered
Chosen Option : 4

Q.15 The Indian Parliament approved the 86th Constitutional Amendment Act of 2002, which establishes the fundamental right to elementary education for children aged _____.

- Ans 1. 5-11 years
 2. 6-14 Years
 3. 6-17 Years
 4. 7-16 Years

Question ID : 264330182974
Option 1 ID : 264330717628
Option 2 ID : 264330717629
Option 3 ID : 264330717631
Option 4 ID : 264330717630
Status : Answered
Chosen Option : 2

Q.16 What was the name of the first dynasty that ruled over Magadh kingdom?

- Ans 1. Haryank dynasty
 2. Nanda dynasty
 3. Mauryan dynasty
 4. Shishunga dynasty

Question ID : 264330123735
Option 1 ID : 264330484975
Option 2 ID : 264330484977
Option 3 ID : 264330484978
Option 4 ID : 264330484976
Status : Answered
Chosen Option : 2

Q.17 Through which of the following Acts does the government check restrictive trade?

- Ans 1. FEMA Act
 2. Industrial Policy Act 1991
 3. MRTP Act
 4. Foreign Trade Policy

Question ID : 264330110194
Option 1 ID : 264330433054
Option 2 ID : 264330433055
Option 3 ID : 264330433053
Option 4 ID : 264330433056
Status : Answered
Chosen Option : 3

Q.18 The 'pawn' is associated with which of the following games?

- Ans 1. Cricket
 2. Chess
 3. Tennis
 4. Badminton

Question ID : 264330130641
Option 1 ID : 264330511678
Option 2 ID : 264330511675
Option 3 ID : 264330511677
Option 4 ID : 264330511676
Status : Answered
Chosen Option : 2

Q.19 Which of the following States hosted the fourth edition of the Khelo India Youth Games?

- Ans 1. Telangana
 2. Haryana
 3. Karnataka
 4. Assam

Question ID : 264330113755
Option 1 ID : 264330447107
Option 2 ID : 264330447105
Option 3 ID : 264330447106
Option 4 ID : 264330447108
Status : Answered
Chosen Option : 2

Q.20 Which of the following stations receives the highest annual rainfall?

- Ans 1. Shillong
 2. Chennai
 3. Jodhpur
 4. Nagpur

Question ID : 264330175825
Option 1 ID : 264330689599
Option 2 ID : 264330689601
Option 3 ID : 264330689602
Option 4 ID : 264330689600
Status : Answered
Chosen Option : 1

Q.21 Which country hosted the IBA Women's World Boxing Championship-2023?

- Ans 1. Bangladesh
 2. Sri Lanka
 3. India
 4. Pakistan

Question ID : 264330113729
Option 1 ID : 264330447004
Option 2 ID : 264330447003
Option 3 ID : 264330447001
Option 4 ID : 264330447002
Status : Marked For Review
Chosen Option : 3

Q.22 Which of the following Articles of the Indian Constitution is related with right to work, to education and to public assistance in certain cases?

- Ans 1. Article 41
 2. Article 44
 3. Article 43
 4. Article 42

Question ID : 264330180057
Option 1 ID : 264330706211
Option 2 ID : 264330706214
Option 3 ID : 264330706213
Option 4 ID : 264330706212
Status : Answered
Chosen Option : 4

Q.23 Which of the following is an example of igneous rock?

- Ans 1. Breccia
 2. Chert
 3. Conglomerate
 4. Rhyolite

Question ID : 264330131680
Option 1 ID : 264330515821
Option 2 ID : 264330515822
Option 3 ID : 264330515820
Option 4 ID : 264330515819
Status : Answered
Chosen Option : 2

Q.24 Siddi Dhamal is performed in which of the following states as a dance to celebrate successful hunting activity?.

- Ans
- 1. Rajasthan
 - 2. Punjab
 - 3. Haryana
 - 4. Gujarat

Question ID : 264330110420
Option 1 ID : 264330433957
Option 2 ID : 264330433959
Option 3 ID : 264330433960
Option 4 ID : 264330433958
Status : Answered
Chosen Option : 1

Q.25 Who among the following was the Sultan of the Delhi Sultanate when the Bahmani Kingdom was established in South India?

- Ans
- 1. Ghiyasuddin Tughluq
 - 2. Muhammad Bin Tughluq
 - 3. Nasir-ud-din Mohammed Tughluq
 - 4. Firuz Shah Tughluq

Question ID : 264330119763
Option 1 ID : 264330469327
Option 2 ID : 264330469330
Option 3 ID : 264330469329
Option 4 ID : 264330469328
Status : Answered
Chosen Option : 3

Q.26 It is a Fundamental Duty of parents to provide educational opportunities to wards aged _____.

- Ans
- 1. 7-14 years
 - 2. 6-16 years
 - 3. 6-14 years
 - 4. 6-15 years

Question ID : 264330130778
Option 1 ID : 264330512224
Option 2 ID : 264330512226
Option 3 ID : 264330512225
Option 4 ID : 264330512223
Status : Answered
Chosen Option : 3

Q.27 Which of the following pairs regarding the judicial powers of the Indian President and their definition is INCORRECTLY matched?

- Ans
- 1. Commutation – It denotes the substitution of one form of punishment for a lighter form
 - 2. Respite – It denotes awarding a lesser sentence in place of that which was originally awarded
 - 3. Reprieve – It implies reducing the period of sentence without changing its character
 - 4. Pardon – it removes both the sentences and the conviction

Question ID : 264330130468
Option 1 ID : 264330510984
Option 2 ID : 264330510985
Option 3 ID : 264330510986
Option 4 ID : 264330510983
Status : Answered
Chosen Option : 3

Q.28 Which of the following is an RBI-registered NBFC- MFI that works on a Joint Liability Group lending model of Grameen?

- Ans
- 1. Asirvad Microfinance Limited
 - 2. ESAF Microfinance and Investments (P) Ltd
 - 3. Fusion Microfinance Pvt Ltd
 - 4. BSS Microfinance Limited

Question ID : 264330116500
Option 1 ID : 264330458085
Option 2 ID : 264330458087
Option 3 ID : 264330458088
Option 4 ID : 264330458086
Status : Not Attempted and Marked For Review
Chosen Option : --

Q.29 Which of the following is an example of subsistence crop of Uttar Pradesh?

- Ans
- 1. Jute
 - 2. Cotton
 - 3. Wheat
 - 4. Sugarcane

Question ID : 264330119879
Option 1 ID : 264330469791
Option 2 ID : 264330469794
Option 3 ID : 264330469792
Option 4 ID : 264330469793
Status : Answered
Chosen Option : 4

Q.30 Annie Besant was a Fabian socialist under the influence of _____ .

- Ans 1. Charles Turner
 2. George Bernard Shaw
 3. Sigmund Freud
 4. Arthur Miller

Question ID : 264330119028
Option 1 ID : 264330466769
Option 2 ID : 264330466767
Option 3 ID : 264330466768
Option 4 ID : 264330466770
Status : Answered
Chosen Option : 4

Q.31 Ibn Battuta's book of travels, called Rihla was originally written in:

- Ans 1. Persian
 2. Prakrit
 3. Arabic
 4. Urdu

Question ID : 264330111377
Option 1 ID : 264330437593
Option 2 ID : 264330437596
Option 3 ID : 264330437595
Option 4 ID : 264330437594
Status : Answered
Chosen Option : 3

Q.32 Which Article of the Indian Constitution states that no citizen of India shall accept any title from any foreign State?

- Ans 1. Article 18 (3)
 2. Article 18 (4)
 3. Article 18 (2)
 4. Article 18 (1)

Question ID : 264330180046
Option 1 ID : 264330706169
Option 2 ID : 264330706170
Option 3 ID : 264330706168
Option 4 ID : 264330706167
Status : Not Attempted and Marked For Review
Chosen Option : --

Q.33 Anantha R Krishnan is a famous _____ player.

- Ans 1. flute
 2. mridangam
 3. santoor
 4. sitar

Question ID : 264330111962
Option 1 ID : 264330439934
Option 2 ID : 264330439933
Option 3 ID : 264330439936
Option 4 ID : 264330439935
Status : Answered
Chosen Option : 2

Q.34 Prior to India, which country introduced Five-Year Plans for policy-making purposes?

- Ans
- 1. Great Britain
 - 2. Germany
 - 3. The US
 - 4. The Union of Soviet Socialist Republics

Question ID : 264330111737
Option 1 ID : 264330439034
Option 2 ID : 264330439036
Option 3 ID : 264330439033
Option 4 ID : 264330439035
Status : Answered
Chosen Option : 4

Q.35 The Great Bath in Mohenjo-Daro was excavated in which of the following areas?

- Ans
- 1. Citadel
 - 2. Residential complex
 - 3. Lower town
 - 4. House courtyard

Question ID : 264330109639
Option 1 ID : 264330430834
Option 2 ID : 264330430836
Option 3 ID : 264330430833
Option 4 ID : 264330430835
Status : Answered
Chosen Option : 2

Q.36 Which of the following options is/are correct about cropland ecosystem?

Statement 1. Cropland is a man-made ecosystem.
Statement 2. Very less genetic diversity is found in cropland ecosystem.

- Ans
- 1. Only statement 1 correct
 - 2. Both statements 1 and 2 correct
 - 3. Both statements 1 and 2 incorrect
 - 4. Only statement 2 correct

Question ID : 264330131804
Option 1 ID : 264330516315
Option 2 ID : 264330516318
Option 3 ID : 264330516317
Option 4 ID : 264330516316
Status : Answered
Chosen Option : 2

Q.37 Bharatanatyam has originated from which of these states?

- Ans
- 1. Tamil Nadu
 - 2. Maharashtra
 - 3. Andhra Pradesh
 - 4. Telangana

Question ID : 264330109276
Option 1 ID : 264330429382
Option 2 ID : 264330429381
Option 3 ID : 264330429384
Option 4 ID : 264330429383
Status : Answered
Chosen Option : 1

Q.38 Who won India's first medal at the Tokyo Olympics 2021?

- Ans 1. Lovlina Borgohain
 2. Mirabai Chanu
 3. Mary Kom
 4. PV Sindhu

Question ID : 264330119259
Option 1 ID : 264330467326
Option 2 ID : 264330467324
Option 3 ID : 264330467323
Option 4 ID : 264330467325
Status : Answered
Chosen Option : 2

Q.39 Which of the following is NOT a noble gas?

- Ans 1. Argon (Ar)
 2. Nitrogen (N)
 3. Neon (Ne)
 4. Helium (He)

Question ID : 264330173653
Option 1 ID : 264330681093
Option 2 ID : 264330681094
Option 3 ID : 264330681092
Option 4 ID : 264330681091
Status : Answered
Chosen Option : 2

Q.40 National income at current prices are calculated based on _____

- Ans 1. constant prices
 2. future prices
 3. comparative prices
 4. prevailing prices

Question ID : 264330120878
Option 1 ID : 264330473728
Option 2 ID : 264330473729
Option 3 ID : 264330473730
Option 4 ID : 264330473727
Status : Answered
Chosen Option : 1

Q.41 Which of the following is the correct match between column-A and column-B?

Column-A

- i. Producer
- ii. Primary consumer
- iii. Secondary consumer
- iv. Decomposer

Column-B

- a. Rabbit
- b. Green plants
- c. Bacteria and fungus
- d. Fox

- Ans
- 1. i-b, ii-a, iii-d, iv-c
 - 2. i-d, ii-c, iii-b, iv-a
 - 3. i-a, ii-b, iii-c, iv-d
 - 4. i-c, ii-d, iii-a, iv-b

Question ID : 264330111896

Option 1 ID : 264330439671

Option 2 ID : 264330439672

Option 3 ID : 264330439669

Option 4 ID : 264330439670

Status : Answered

Chosen Option : 1

Q.42 The much-loved English novel, 'Alice's Adventures in Wonderland' was written by which of the following authors?

- Ans
- 1. Herman Melville
 - 2. Edgar Allan Poe
 - 3. Lewis Carroll
 - 4. Mary Shelly

Question ID : 26433055369

Option 1 ID : 264330216462

Option 2 ID : 264330216463

Option 3 ID : 264330216460

Option 4 ID : 264330216461

Status : Answered

Chosen Option : 4

Q.43 Which of the following words were added in the Preamble by the Forty-second Amendment Act?

- Ans
- 1. Justice, social
 - 2. Fraternity assuring dignity
 - 3. Liberty of thought
 - 4. Socialist, secular

Question ID : 264330110560

Option 1 ID : 264330434517

Option 2 ID : 264330434520

Option 3 ID : 264330434519

Option 4 ID : 264330434518

Status : Answered

Chosen Option : 4

Q.44 Identify the scheme that was launched by the Prime Minister on 8 April 2015 for providing loans upto ₹10 lakh to the non-corporate, non-farm small/micro enterprises?

- Ans
- 1. Bharat Rojgar Yojana
 - 2. Pradhan Mantri Mudra Yojana
 - 3. Mahatma Gandhi National Rural Employment Guarantee Act
 - 4. Pradhan Mantri Shram Yogi Maan-dhan

Question ID : 264330130603
Option 1 ID : 264330511526
Option 2 ID : 264330511523
Option 3 ID : 264330511524
Option 4 ID : 264330511525
Status : Answered
Chosen Option : 2

Q.45 According to the census of India 2011, which group of states and union territories from the following recorded the highest literacy rate?

- Ans
- 1. Goa and Lakshadweep
 - 2. Mizoram and Delhi
 - 3. Kerala and Lakshadweep
 - 4. Kerala and Puducherry

Question ID : 264330167029
Option 1 ID : 264330655120
Option 2 ID : 264330655122
Option 3 ID : 264330655121
Option 4 ID : 264330655119
Status : Answered
Chosen Option : 3

Q.46 Who among the following founded the Forward Bloc in 1939?

- Ans
- 1. Mahatma Gandhi
 - 2. Chittaranjan Das
 - 3. Subhash Chandra Bose
 - 4. Jawaharlal Nehru

Question ID : 264330119004
Option 1 ID : 264330466671
Option 2 ID : 264330466674
Option 3 ID : 264330466673
Option 4 ID : 264330466672
Status : Answered
Chosen Option : 3

Q.47 The Pradhan Mantri Garib Kalyan Yojana (PMGKY) was launched in the year _____.

- Ans
- 1. 2014
 - 2. 2017
 - 3. 2016
 - 4. 2015

Question ID : 264330110010
Option 1 ID : 264330432317
Option 2 ID : 264330432320
Option 3 ID : 264330432319
Option 4 ID : 264330432318
Status : Answered
Chosen Option : 1

Q.48 Who among the following Bharatnatyam dancers received the prestigious Natya Kalanidhi award in 2021?

- Ans** 1. Chitra Visweswaran
 2. Padma Subrahmanyam
 3. Guru Bipin Singh
 4. Pandit Birju Maharaj

Question ID : 264330112873
Option 1 ID : 264330443580
Option 2 ID : 264330443579
Option 3 ID : 264330443578
Option 4 ID : 264330443577
Status : Answered
Chosen Option : 2

Q.49 Who among the following was known for creating fusion arts by adapting European theatrical techniques to Indian Classical dance combined with Indian folk and tribal dance?

- Ans** 1. Uday Shankar
 2. Kelucharan Mahapatra
 3. Vempi Chinna Satyam
 4. Bipin Singh

Question ID : 264330111967
Option 1 ID : 264330439955
Option 2 ID : 264330439953
Option 3 ID : 264330439956
Option 4 ID : 264330439954
Status : Answered
Chosen Option : 1

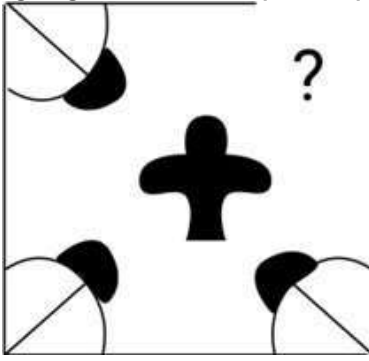
Q.50 The great poet and humanist writer Rabindra Nath Thakur returned his knighthood in protest of which incident?

- Ans** 1. Bengal partition, 1905
 2. Pitt's India Act of 1784
 3. Kamagatamaru case, 1914
 4. Jallianwala Bagh Massacre, 1919

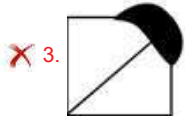
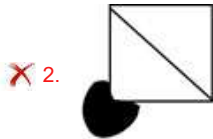
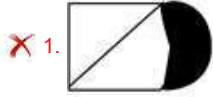
Question ID : 264330123743
Option 1 ID : 264330485007
Option 2 ID : 264330485010
Option 3 ID : 264330485008
Option 4 ID : 264330485009
Status : Answered
Chosen Option : 4

Section : Reasoning

Q.1 Select the figure from the given options that will replace the question mark (?) in the figure given below to complete the pattern.



Ans



Question ID : 264330116616

Option 1 ID : 264330458550

Option 2 ID : 264330458549

Option 3 ID : 264330458552

Option 4 ID : 264330458551

Status : Answered

Chosen Option : 4

Adda247

Q.2 Which figure should replace the question mark (?) if the following series were to be continued?

L D 3 A	B L D R	= □ L D	A = □ R	3 S = □	
S	A	B	D	A	?
B = □ R	= □ 3 S	A 3 S R	3 S L B	D L B R	

Ans

✗ 1.

= 3 S A
□
B D L R

✗ 2.

S = B R
□
3 D L A

✓ 3.

D 3 S R
□
L B = A

✗ 4.

D 3 S =
□
L B R A

Question ID : 264330103898

Option 1 ID : 264330407896

Option 2 ID : 264330407893

Option 3 ID : 264330407895

Option 4 ID : 264330407894

Status : Answered

Chosen Option : 4

Q.3 Which of the following options will replace the question mark (?) in the given series?
9000, 7200, 5760, ?, 3686.4

Ans ✗ 1. 4600

✗ 2. 3860

✓ 3. 4608

✗ 4. 3456

Question ID : 264330109436

Option 1 ID : 264330430023

Option 2 ID : 264330430024

Option 3 ID : 264330430021

Option 4 ID : 264330430022

Status : Answered

Chosen Option : 3

Q.4 Which of the following option figures will complete the pattern in the figure given below?



Ans

✗ 1.



✗ 2.



✓ 3.



✗ 4.



Question ID : 26433080598

Option 1 ID : 264330316325

Option 2 ID : 264330316328


Option 3 ID : 264330316327

Option 4 ID : 264330316326

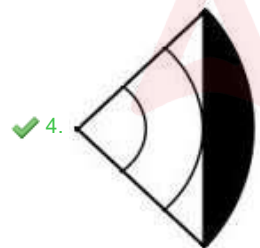

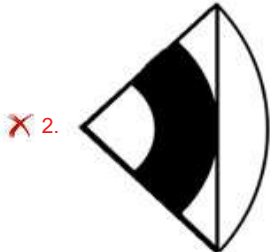
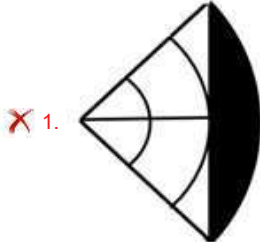
Status : Answered

Chosen Option : 3

Q.5 Select the figure from the options that can replace the question mark (?) and complete the given pattern.



Ans



Question ID : 26433082913

Option 1 ID : 264330325485

Option 2 ID : 264330325488

Option 3 ID : 264330325487

Option 4 ID : 264330325486

Status : Answered

Chosen Option : 4

Q.6 Which of the following option figures will complete the pattern in the figure given below?



Ans



Question ID : 26433080631

Option 1 ID : 264330316459

Option 2 ID : 264330316457

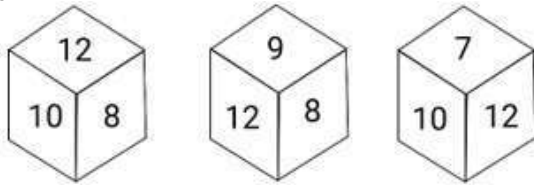
Option 3 ID : 264330316460

Option 4 ID : 264330316458

Status : Answered

Chosen Option : 2

Q.7 Six numbers, 7, 8, 9, 10, 11 and 12 are written on different faces of a dice. Three positions of this dice are shown here. Find the number on the face opposite 12.



- Ans
- 1. 10
 - 2. 9
 - 3. 11
 - 4. 8

Question ID : 264330106398
 Option 1 ID : 264330417895
 Option 2 ID : 264330417894
 Option 3 ID : 264330417896
 Option 4 ID : 264330417893
 Status : Answered
 Chosen Option : 3

Q.8 Select the correct combination of mathematical signs to sequentially replace the * signs and to balance the given equation.
 $198 * 11 * 18 * 20 * 50 * 294$

- Ans
- 1. +, x, =, +, -
 - 2. +, +, x, -, =
 - 3. +, x, -, +, =
 - 4. +, x, +, -, =

Question ID : 26433076550
 Option 1 ID : 264330300267
 Option 2 ID : 264330300265
 Option 3 ID : 264330300264
 Option 4 ID : 264330300266
 Status : Answered
 Chosen Option : 4

Q.9 Read the given statements and conclusions carefully. Assuming that the information given in the statements is true, even if it appears to be at variance with commonly known facts, decide which of the given conclusions logically follow(s) from the statements.

Statements:

Some roses are lilies.

Some lilies are jasmine.

Conclusions:

I. Some jasmines are roses.

II. All jasmines are roses.

- Ans
- 1. Only conclusion II follows
 - 2. Neither conclusion I nor II follows
 - 3. Both conclusions I and II follow
 - 4. Only conclusion I follows

Question ID : 26433069508
 Option 1 ID : 264330272545
 Option 2 ID : 264330272547
 Option 3 ID : 264330272546
 Option 4 ID : 264330272544
 Status : Answered
 Chosen Option : 2

Q.10 Which of the following option figures will complete the pattern in the figure given below?

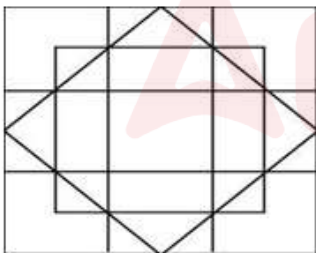


Ans



Question ID : 26433080610
 Option 1 ID : 264330316375
 Option 2 ID : 264330316374
 Option 3 ID : 264330316373
 Option 4 ID : 264330316376
 Status : Answered
 Chosen Option : 1

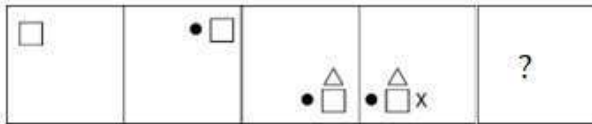
Q.11 How many triangles are there in the given figure?



- Ans
- ✗ 1. 32
 - ✗ 2. 24
 - ✓ 3. 28
 - ✗ 4. 20

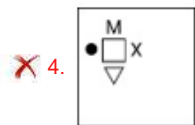
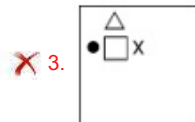
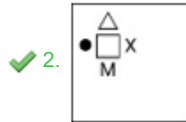
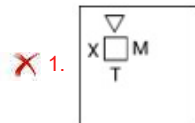
Question ID : 26433091712
 Option 1 ID : 264330360216
 Option 2 ID : 264330360215
 Option 3 ID : 264330360214
 Option 4 ID : 264330360213
 Status : Answered
 Chosen Option : 3

Q.12 Given below is a series of figures – A, B, C and D which follow a particular pattern. Which of the given option figures should come in place of E to continue the series?



(A) (B) (C) (D) (E)

Ans



Question ID : 264330111291

Option 1 ID : 264330437249

Option 2 ID : 264330437252

Option 3 ID : 264330437250

Option 4 ID : 264330437251

Status : Answered

Chosen Option : 2

Q.13 Select the option that is related to the third word in the same way as the second word is related to the first word.

(The words must be considered as meaningful English words and must not be related to each other based on the number of letters/number of consonants/vowels in the word)

Virus : Influenza :: Fungus : ?

- Ans
- ✗ 1. Algae
 - ✗ 2. Amaltas
 - ✗ 3. Bacteria
 - ✓ 4. Aspergillosis

Question ID : 26433070281

Option 1 ID : 264330275602

Option 2 ID : 264330275601

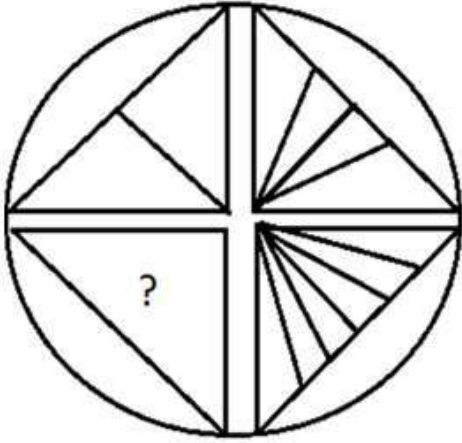
Option 3 ID : 264330275603

Option 4 ID : 264330275600

Status : Answered

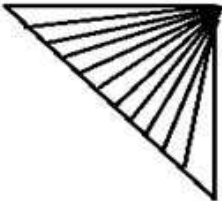
Chosen Option : 4

Q.14 Select the option figure that will replace the question mark (?) in the figure given below to complete the pattern.

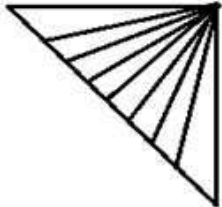


Ans

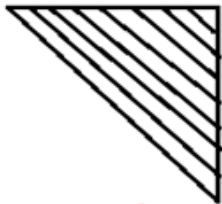
1.



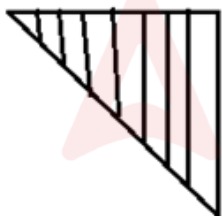
2.



3.



4.



Question ID : 264330118230

Option 1 ID : 264330464738

Option 2 ID : 264330464737

Option 3 ID : 264330464736

Option 4 ID : 264330464735

Status : Answered

Chosen Option : 2

Q.15 Select the option that is related to the fourth term in the same way as the first term is related to the second term and the fifth term is related to the sixth term.
7 : 46 :: ? : 78 :: 11 : 118

- Ans
- 1. 13
 - 2. 11
 - 3. 9
 - 4. 10

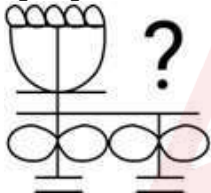
Question ID : 26433052093
Option 1 ID : 264330203677
Option 2 ID : 264330203676
Option 3 ID : 264330203674
Option 4 ID : 264330203675
Status : Answered
Chosen Option : 3

Q.16 Which of the following terms will replace the question mark (?) in the given series?
KYIB, IUKF, GQMJ, ?, CIQR

- Ans
- 1. HNON
 - 2. ENOM
 - 3. HMNO
 - 4. EMON

Question ID : 264330102175
Option 1 ID : 264330401165
Option 2 ID : 264330401168
Option 3 ID : 264330401167
Option 4 ID : 264330401166
Status : Answered
Chosen Option : 4

Q.17 Select the figure from the given options that will replace the question mark (?) in the figure given below and complete the pattern.



- Ans
- 1.
 - 2.
 - 3.
 - 4.

Question ID : 264330111712
Option 1 ID : 264330438933
Option 2 ID : 264330438934
Option 3 ID : 264330438936
Option 4 ID : 264330438935
Status : Answered
Chosen Option : 1

Q.18 Select the correct mirror image of the given figure when the mirror is placed at 'AB' as shown.



Ans

1. V 2 33 5 t e

2. V 2 33 5 t e

3. V 2 33 5 t e

4. e t 5 33 2 V

Question ID : 264330114699

Option 1 ID : 264330450882

Option 2 ID : 264330450884


Option 3 ID : 264330450881

Option 4 ID : 264330450883

Status : Answered

Chosen Option : 2

Q.19 Select the correct mirror image of the given combination when the mirror is placed at 'XY' as shown below.



Ans

1. V N I 2 3 4 5 D

2. D Q Z 6 5 I N A

3. A N I 5 6 Z Q D

4. D Q Z 6 5 I N A

Question ID : 264330129693

Option 1 ID : 264330508139

Option 2 ID : 264330508141

Option 3 ID : 264330508138

Option 4 ID : 264330508140

Status : Answered

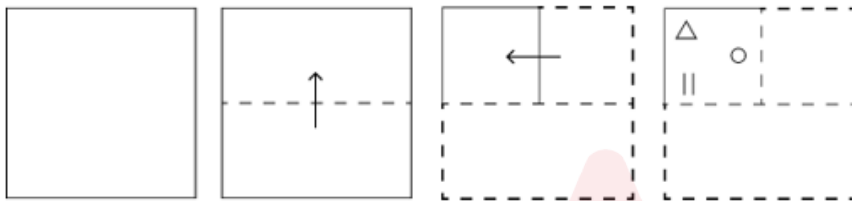
Chosen Option : 4

Q.20 Select the correct combination of mathematical signs to sequentially replace the * signs and to balance the given equation.
 $242 * 11 * 76 * 34 * 2 * 32$

- Ans
- 1. $+ - + \times =$
 - 2. $+ + - \times =$
 - 3. $+ + - = \times$
 - 4. $\div + - = \times$

Question ID : 26433085722
 Option 1 ID : 264330336591
 Option 2 ID : 264330336589
 Option 3 ID : 264330336592
 Option 4 ID : 264330336590
 Status : Answered
 Chosen Option : 4

Q.21 A square sheet of paper is folded along the dotted line successively along the directions shown and is then punched in the last. How would the paper look when unfolded?



Ans

- 1.
- 2.
- 3.
- 4.

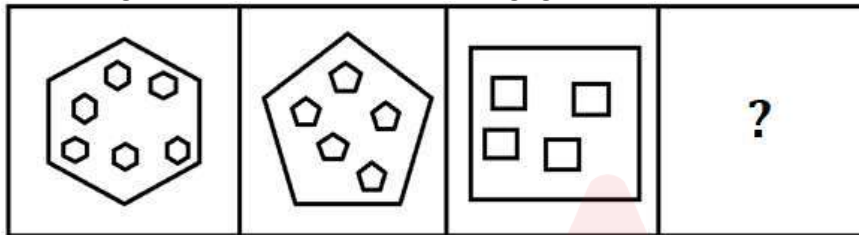
Question ID : 264330172431
 Option 1 ID : 264330676277
 Option 2 ID : 264330676275
 Option 3 ID : 264330676278
 Option 4 ID : 264330676276
 Status : Answered
 Chosen Option : 1

Q.22 C, D, E, F, M and N are sitting around a circular table facing the centre. D sits second to the right of M. F sits to the immediate left of N. N is not an immediate neighbour of M. C is not an immediate neighbour of D. Who among the following is an immediate neighbour of E?

- Ans
- 1. N
 - 2. F
 - 3. D
 - 4. C

Question ID : 264330104021
 Option 1 ID : 264330408387
 Option 2 ID : 264330408385
 Option 3 ID : 264330408386
 Option 4 ID : 264330408388
 Status : Answered
 Chosen Option : 3

Q.23 Select the figure that will come next in the following figure series.



Ans

- 1.
- 2.
- 3.
- 4.

Question ID : 264330129653
 Option 1 ID : 264330507980
 Option 2 ID : 264330507979
 Option 3 ID : 264330507981
 Option 4 ID : 264330507978
 Status : Answered
 Chosen Option : 1

Q.24 In a certain code language, 'CALIBER' is written as 'ECNGDGT' and 'BURNING' is written as 'DWTLKPI'. How will 'AUCTION' be written in that language?

- Ans
- 1. BVERQKST
 - 2. CVBTKQR
 - 3. BWDSKPR
 - 4. CWERKQP

Question ID : 26433089418
Option 1 ID : 264330351173
Option 2 ID : 264330351175
Option 3 ID : 264330351176
Option 4 ID : 264330351174
Status : Answered
Chosen Option : 4

Q.25 Select the set in which the numbers are related in the same way as are the numbers of the following sets.

(NOTE : Operations should be performed on the whole numbers, without breaking down the numbers into its constituent digits. E.g. 13 – Operations on 13 such as adding/deleting/multiplying etc. to 13 can be performed. Breaking down 13 into 1 and 3 and then performing mathematical operations on 1 and 3 is NOT allowed)
(40, 253, 17)
(30, 187, 13)

- Ans
- 1. (50, 385, 15)
 - 2. (25, 100, 15)
 - 3. (40, 240, 20)
 - 4. (17, 77, 9)

Question ID : 26433097438
Option 1 ID : 264330382443
Option 2 ID : 264330382442
Option 3 ID : 264330382441
Option 4 ID : 264330382444
Status : Answered
Chosen Option : 1

Section : Numerical Ability

Q.1 The simple interest on a sum of ₹1,500 at 5% p.a. for 3 years is:

- Ans
- 1. ₹192
 - 2. ₹195
 - 3. ₹180
 - 4. ₹225

Question ID : 264330182517
Option 1 ID : 264330715861
Option 2 ID : 264330715859
Option 3 ID : 264330715860
Option 4 ID : 264330715862
Status : Answered
Chosen Option : 4

Q.2 A shopkeeper marks an article 35% above the cost price, and offers 20% discount on the marked price, what is his gain percentage?

- Ans 1. 8%
 2. 7%
 3. 5%
 4. 9%

Question ID : 264330168926
Option 1 ID : 264330662510
Option 2 ID : 264330662508
Option 3 ID : 264330662507
Option 4 ID : 264330662509
Status : Answered
Chosen Option : 1

Q.3 What is the unit digit of the product of all the prime numbers between 51 and 78?

- Ans 1. 2
 2. 3
 3. 7
 4. 6

Question ID : 264330104275
Option 1 ID : 264330409403
Option 2 ID : 264330409404
Option 3 ID : 264330409402
Option 4 ID : 264330409401
Status : Answered
Chosen Option : 3

Q.4 If a box was sold at a loss of ₹350 for ₹4,650, then the percentage loss is equal to:

- Ans 1. 7%
 2. 6%
 3. 5%
 4. 8%

Question ID : 264330169418
Option 1 ID : 264330664429
Option 2 ID : 264330664428
Option 3 ID : 264330664427
Option 4 ID : 264330664430
Status : Answered
Chosen Option : 1

Q.5 The product of the LCM and HCF of two numbers is 48. The difference between the two numbers is 13. Find the numbers.

- Ans 1. 9 and 22
 2. 6 and 19
 3. 3 and 16
 4. 10 and 23

Question ID : 264330104267
Option 1 ID : 264330409372
Option 2 ID : 264330409369
Option 3 ID : 264330409370
Option 4 ID : 264330409371
Status : Answered
Chosen Option : 3

Q.6 The slant height of a cone is 5 cm and its diameter is 8 cm. What is the volume of the cone (correct to two decimal places)? (Where $\pi = \frac{22}{7}$)

- Ans**
- 1. 35.66 cm³
 - 2. 50.28 cm³
 - 3. 59.82 cm³
 - 4. 28.28 cm³

Question ID : 264330118142
Option 1 ID : 264330464384
Option 2 ID : 264330464385
Option 3 ID : 264330464386
Option 4 ID : 264330464383
Status : Answered
Chosen Option : 2

Q.7 After a 15% decline, the income of Ajay stands at ₹2,12,500. What was his original income (in ₹)?

- Ans**
- 1. 2,25,000
 - 2. 1,80,625
 - 3. 2,50,000
 - 4. 2,40,000

Question ID : 264330103308
Option 1 ID : 264330405540
Option 2 ID : 264330405538
Option 3 ID : 264330405539
Option 4 ID : 264330405537
Status : Answered
Chosen Option : 3

Q.8 In a 600 m race, A gave B a head start of 5 seconds and still won the race by 20 seconds. If the ratio of the speed of A to the speed of B is 2 : 1, then the speed of B is:

- Ans**
- 1. 21 m/sec
 - 2. 12 m/sec
 - 3. 10 m/sec
 - 4. 18 m/sec

Question ID : 264330168935
Option 1 ID : 264330662546
Option 2 ID : 264330662544
Option 3 ID : 264330662543
Option 4 ID : 264330662545
Status : Answered
Chosen Option : 2

Q.9 There are 50 students in a class. The average marks of 20 students is 70 and the remaining 30 have average marks of 80. Calculate the average score of the whole class.

- Ans
- 1. 70
 - 2. 75
 - 3. 76
 - 4. 74

Question ID : 264330126555
Option 1 ID : 264330495892
Option 2 ID : 264330495894
Option 3 ID : 264330495893
Option 4 ID : 264330495895
Status : Answered
Chosen Option : 3

Q.10 A man borrowed a sum of money and agreed to pay off by paying ₹4,200 at the end of the first year and ₹4,410 at the end of the second year. If the rate of compound interest was 5% per annum, find the sum borrowed.

- Ans
- 1. ₹7,500
 - 2. ₹7,000
 - 3. ₹8,500
 - 4. ₹8,000

Question ID : 264330104317
Option 1 ID : 264330409570
Option 2 ID : 264330409569
Option 3 ID : 264330409572
Option 4 ID : 264330409571
Status : Answered
Chosen Option : 4

Q.11 By what percentage should a woman increase the speed of her car to reduce the time by 80% to cover a fixed distance?

- Ans
- 1. 400%
 - 2. 100%
 - 3. 300%
 - 4. 200%

Question ID : 264330112845
Option 1 ID : 264330443467
Option 2 ID : 264330443466
Option 3 ID : 264330443468
Option 4 ID : 264330443465
Status : Answered
Chosen Option : 1

Q.12 A, B, C work one after the other in that order. Each can finish a work individually in 10, 16, 12 days, respectively. After working for 3 such cycles ABC, ABC, ABC, then A and C leave the work. B alone will complete the rest of the work in:

- Ans
- ✓ 1. $4\frac{1}{5}$ days
 - ✗ 2. $1\frac{4}{5}$ days
 - ✗ 3. $5\frac{4}{5}$ days
 - ✗ 4. $5\frac{1}{4}$ days

Question ID : 264330103748
Option 1 ID : 264330407297
Option 2 ID : 264330407299
Option 3 ID : 264330407298
Option 4 ID : 264330407300
Status : Answered
Chosen Option : 1

Q.13 An ice cream cone is to be made to have volume $\frac{128}{3}\pi$ and the height of the cone is double the radius of the cone. What is the slant height of the cone?

- Ans
- ✗ 1. $\sqrt{40}$
 - ✗ 2. $\sqrt{90}$
 - ✗ 3. $\sqrt{60}$
 - ✓ 4. $\sqrt{80}$

Question ID : 264330112120
Option 1 ID : 264330440567
Option 2 ID : 264330440568
Option 3 ID : 264330440565
Option 4 ID : 264330440566
Status : Answered
Chosen Option : 4

Q.14 Which of the following is a pair of co-primes?

- Ans
- ✗ 1. (7, 35)
 - ✗ 2. (217, 651)
 - ✗ 3. (32, 62)
 - ✓ 4. (198, 175)

Question ID : 264330105984
Option 1 ID : 264330416237
Option 2 ID : 264330416239
Option 3 ID : 264330416240
Option 4 ID : 264330416238
Status : Answered
Chosen Option : 1

Q.15 Let $x = 5, y = 8$. Arrange the following numbers in ascending order.

$$\frac{x+1}{y-1}, \frac{2x}{2y-3}, \frac{y+1}{2x-1}, \frac{y+1}{3x-y}$$

Ans

1. $\frac{2x}{2y-3}, \frac{x+1}{y-1}, \frac{y+1}{3x-y}, \frac{y+1}{2x-1}$

2. $\frac{2x}{2y-3}, \frac{y+1}{2x-1}, \frac{x+1}{y-1}, \frac{y+1}{3x-y}$

3. $\frac{2x}{2y-3}, \frac{x+1}{y-1}, \frac{y+1}{2x-1}, \frac{y+1}{3x-y}$

4. $\frac{x+1}{y-1}, \frac{2x}{2y-3}, \frac{y+1}{2x-1}, \frac{y+1}{3x-y}$

Question ID : 264330126120

Option 1 ID : 264330494154

Option 2 ID : 264330494152

Option 3 ID : 264330494155

Option 4 ID : 264330494153

Status : Answered

Chosen Option : 3

Section : Computer Proficiency

Q.1 In MS-Word 2010, Page number option comes under which of the following menus?

Ans 1. Pages

2. Header and Footer

3. Home Tab

4. Page layout

Question ID : 264330176705

Option 1 ID : 264330693038

Option 2 ID : 264330693035

Option 3 ID : 264330693037

Option 4 ID : 264330693036

Status : Answered

Chosen Option : 1

Q.2 In MS Excel 365, when entering data into an MS Excel 365 spreadsheet, which data type is most suitable for a person's first name?

Ans 1. Date

2. Currency

3. Text

4. Number

Question ID : 264330178569

Option 1 ID : 264330700303

Option 2 ID : 264330700306

Option 3 ID : 264330700304

Option 4 ID : 264330700305

Status : Answered

Chosen Option : 3

Q.3 Which option allows you to adjust the line spacing between lines of text in a paragraph in MS-Word 365?

- Ans
- 1. Line Spacing
 - 2. Text Indentation
 - 3. Paragraph Border
 - 4. Paragraph Alignment

Question ID : 264330173333
Option 1 ID : 264330679813
Option 2 ID : 264330679811
Option 3 ID : 264330679814
Option 4 ID : 264330679812
Status : Answered
Chosen Option : 1

Q.4 What is the default print range in Microsoft Excel 365, when printing an entire worksheet?

- Ans
- 1. Entire Workbook
 - 2. Active Sheet
 - 3. Selected Range
 - 4. All Sheets

Question ID : 264330178082
Option 1 ID : 264330698394
Option 2 ID : 264330698392
Option 3 ID : 264330698393
Option 4 ID : 264330698391
Status : Answered
Chosen Option : 2

Q.5 In MS Excel 365, you are working on an Excel worksheet and need to select an entire row above the current row. Which keyboard shortcut combination should you use?

- Ans
- 1. Ctrl + Spacebar
 - 2. Shift + Spacebar
 - 3. Alt + Spacebar
 - 4. Ctrl + +

Question ID : 264330182782
Option 1 ID : 264330716900
Option 2 ID : 264330716899
Option 3 ID : 264330716902
Option 4 ID : 264330716901
Status : Not Attempted and Marked For Review
Chosen Option : --

Q.6 Which of the following is NOT a layer of the Internet Protocol Suite (TCP/IP)?

- Ans
- 1. Application layer
 - 2. Physical layer
 - 3. Network layer
 - 4. Transport layer

Question ID : 264330178552
Option 1 ID : 264330700235
Option 2 ID : 264330700238
Option 3 ID : 264330700237
Option 4 ID : 264330700236
Status : Answered
Chosen Option : 2

Q.7 In MS Word 365, what happens when you select text and then press the 'Backspace' key?

- Ans
- 1. The text is moved to the end of the document
 - 2. The text is formatted with a bold style
 - 3. The text is copied to the clipboard
 - 4. The text is deleted to the left of the cursor

Question ID : 264330180855
Option 1 ID : 264330709386
Option 2 ID : 264330709384
Option 3 ID : 264330709383
Option 4 ID : 264330709385
Status : Answered
Chosen Option : 4

Q.8 Which of the following operations is done using shortcut key Ctrl + Shift + > in MS Word 365?

- Ans
- 1. Increase the font size
 - 2. Decrease the font size
 - 3. Left Alignment of text
 - 4. Right Alignment of text

Question ID : 264330180445
Option 1 ID : 264330707747
Option 2 ID : 264330707748
Option 3 ID : 264330707749
Option 4 ID : 264330707750
Status : Answered
Chosen Option : 1

Q.9 Which formatting feature in MS Word 365, is used to emphasise text by making it bold, italic or underlined in documents?

- Ans
- 1. Hyperlinking
 - 2. Page margins
 - 3. Font styling
 - 4. Text wrapping

Question ID : 264330178578
Option 1 ID : 264330700340
Option 2 ID : 264330700342
Option 3 ID : 264330700341
Option 4 ID : 264330700339
Status : Answered
Chosen Option : 3

Q.10 An attachment in an E-mail can be:

- 1) Digital photos
- 2) Documents

- Ans
- 1. Only (2)
 - 2. Only (1)
 - 3. Both (1) and (2)
 - 4. Neither (1) nor (2)

Question ID : 264330175931

Option 1 ID : 264330690020

Option 2 ID : 264330690019

Option 3 ID : 264330690021

Option 4 ID : 264330690022

Status : Answered

Chosen Option : 3



Constable Executive Male and Female in Delhi Police Examination 2023

Roll Number	
Candidate Name	
Venue Name	Jaipur Engineering College
Exam Date	14/11/2023
Exam Time	12:00 PM - 1:30 PM
Subject	Constable Executive Male and Female in Delhi Police Examination 2023

Section : General Knowledge

Q.1 Who was defeated by Chandragupta Maurya in order to found the Maurya dynasty?

- Ans 1. Dhana Nanda.
 2. Bimbisara
 3. Mahapadma Nanda
 4. Ajatshatru

Question ID : 264330119709
Option 1 ID : 264330469114
Option 2 ID : 264330469112
Option 3 ID : 264330469111
Option 4 ID : 264330469113
Status : Answered
Chosen Option : 2

Q.2 Any dispute between the Government of India and one or more States or between the Government of India and any State or States comes under _____ jurisdiction of the Supreme Court of India.

- Ans 1. Advisory
 2. Appellate
 3. Exclusive Original
 4. Writ

Question ID : 264330130479
Option 1 ID : 264330511029
Option 2 ID : 264330511028
Option 3 ID : 264330511027
Option 4 ID : 264330511030
Status : Answered
Chosen Option : 1

Q.3 Kajli Teej is the cultural festival of which Indian state?

- Ans 1. Rajasthan
 2. Goa
 3. West Bengal
 4. Maharashtra

Question ID : 264330109608
Option 1 ID : 264330430711
Option 2 ID : 264330430710
Option 3 ID : 264330430712
Option 4 ID : 264330430709
Status : Not Answered
Chosen Option : --

Q.4 In whose presence does the Governor take oath or make affirmation in case of the absence of the Chief Justice of the High Court?

- Ans
- 1. Nominated judge by President
 - 2. Secretary of State Legislature
 - 3. Senior-most judge of High Court available
 - 4. Speaker of State legislature

Question ID : 26433069888
Option 1 ID : 264330274058
Option 2 ID : 264330274056
Option 3 ID : 264330274059
Option 4 ID : 264330274057
Status : Answered
Chosen Option : 4

Q.5 What is the slogan of the Pradhan Mantri Jan Dhan Yojana?

- Ans
- 1. MeraAdhikar, MeraKhaata
 - 2. MeraKhaata, MeraAdhikar
 - 3. Mera Paisa, Mere Bank Me
 - 4. Mera Khaata, Bhagya Vidhaata

Question ID : 26433059311
Option 1 ID : 264330232122
Option 2 ID : 264330232121
Option 3 ID : 264330232123
Option 4 ID : 264330232120
Status : Answered
Chosen Option : 2

Q.6 According to Census 2011 of India, which religion recorded highest literacy rate from following?

- Ans
- 1. Hindu
 - 2. Muslim
 - 3. Jain
 - 4. Sikh

Question ID : 264330138114
Option 1 ID : 264330541064
Option 2 ID : 264330541065
Option 3 ID : 264330541063
Option 4 ID : 264330541066
Status : Not Answered
Chosen Option : --

Q.7 In 1932, the Poona Pact was signed between Mahatma Gandhi and _____.

- Ans
- 1. C. Natesa Mudaliar
 - 2. Taravath Madhavan Nair
 - 3. Ramaswami Naicker-Periyar
 - 4. Dr. Babasaheb Ambedkar

Question ID : 264330114860
Option 1 ID : 264330451525
Option 2 ID : 264330451526
Option 3 ID : 264330451528
Option 4 ID : 264330451527
Status : Answered
Chosen Option : 4

Q.8 In which year did India adopt a dual exchange rate for the interim period?

- Ans
- 1. 1994
 - 2. 1990
 - 3. 1996
 - 4. 1992

Question ID : 264330109396
Option 1 ID : 264330429863
Option 2 ID : 264330429861
Option 3 ID : 264330429864
Option 4 ID : 264330429862
Status : Not Answered
Chosen Option : --

Q.9 The Hindi novel 'Indrajal' is written by:

- Ans
- 1. Ramdhari Singh Dinkar
 - 2. Harivansh Rai Bachchan
 - 3. Jaishankar Prasad
 - 4. Namvar Singh

Question ID : 26433072947
Option 1 ID : 264330285980
Option 2 ID : 264330285982
Option 3 ID : 264330285983
Option 4 ID : 264330285981
Status : Not Answered
Chosen Option : --

Q.10 Rafflesia arnoldii is famous because:

- Ans
- 1. it has the thickest trunk
 - 2. it has the largest leaves in the plant kingdom
 - 3. it is the tallest plant in the plant kingdom
 - 4. it has the largest flower in the plant kingdom

Question ID : 264330120904
Option 1 ID : 264330473833
Option 2 ID : 264330473834
Option 3 ID : 264330473831
Option 4 ID : 264330473832
Status : Not Answered
Chosen Option : --

Q.11 National Investment Fund in India is a corpus fund that mobilises its financial receipts from _____.

- Ans
- 1. proceeds of profits of Central Public Sector Undertakings
 - 2. proceeds from disinvestment of Central Public Sector Undertakings
 - 3. savings of General Provident Fund
 - 4. contributory pension scheme

Question ID : 264330111786
Option 1 ID : 264330439232
Option 2 ID : 264330439231
Option 3 ID : 264330439230
Option 4 ID : 264330439229
Status : Not Answered
Chosen Option : --

Q.12 When did India host the Asian Games for the first time?

Ans 1. 1951

2. 1954

3. 1962

4. 1990

Question ID : 264330119257

Option 1 ID : 264330467317

Option 2 ID : 264330467315

Option 3 ID : 264330467316

Option 4 ID : 264330467318

Status : Answered

Chosen Option : 1

Q.13 Destruction, weathering, dissolving, rainfall, and lithification are the major geological processes that contribute to the formation of which of the following rocks?

Ans 1. Igneous rocks

2. Sedimentary rocks

3. Sub-metamorphic rocks

4. Metamorphic rocks

Question ID : 264330131816

Option 1 ID : 264330516363

Option 2 ID : 264330516364

Option 3 ID : 264330516366

Option 4 ID : 264330516365

Status : Not Answered

Chosen Option : --

Q.14 Which of the following statements are correct regarding festivals followed in Christianity?

A. Easter is the day celebrated for the 'Resurrection of Jesus Christ'.

B. According to the Bible, 'Three days after Jesus was crucified, he was resurrected'.

C. Good Friday is to commemorate the day of crucifixion of Jesus Christ.

Ans 1. A and C only

2. B and C only

3. A, B and C

4. A and B only

Question ID : 264330119656

Option 1 ID : 264330468901

Option 2 ID : 264330468900

Option 3 ID : 264330468902

Option 4 ID : 264330468899

Status : Answered

Chosen Option : 1

Q.15 Which of the following is NOT a key player in the microfinance sector?

- Ans 1. IDBI
 2. Regional rural banks
 3. Small finance banks
 4. Commercial banks

Question ID : 264330119669
Option 1 ID : 264330468952
Option 2 ID : 264330468954
Option 3 ID : 264330468953
Option 4 ID : 264330468951
Status : Not Answered
Chosen Option : --

Q.16 The Begumpuri mosque was built during the reign of Sultan _____.

- Ans 1. Ghiyasuddin Balban
 2. Qutbuddin Aybak
 3. Muhammad Bin Tughluq
 4. Jalaluddin Khalji

Question ID : 264330183098
Option 1 ID : 264330718127
Option 2 ID : 264330718126
Option 3 ID : 264330718125
Option 4 ID : 264330718124
Status : Not Answered
Chosen Option : --

Q.17 R Muthukannammal was conferred the Padma Shri award in 2022. Which of the following is her contribution?

- Ans 1. Working with Orissa's poor and backward communities
 2. Specializing in the study of Indian society
 3. Being a custodian of the early dance form of Bharatnatyam
 4. Playing a key role in powering India's Blue Revolution

Question ID : 26433091036
Option 1 ID : 264330357555
Option 2 ID : 264330357554
Option 3 ID : 264330357556
Option 4 ID : 264330357553
Status : Answered
Chosen Option : 4

Q.18 Which of the following ministries collaborated with NCERT on a joint mission for the NISHTHA capacity-building programme for Eklavya school teachers and principals?

- Ans 1. Ministry of Skill Development and Entrepreneurship
 2. Ministry of Minority Affairs
 3. Ministry of Education
 4. Ministry of Tribal Affairs

Question ID : 264330111589
Option 1 ID : 264330438441
Option 2 ID : 264330438443
Option 3 ID : 264330438442
Option 4 ID : 264330438444
Status : Answered
Chosen Option : 3

Q.19 What is the molecular mass of an ozone molecule?

- Ans 1. 32
 2. 48
 3. 16
 4. 18

Question ID : 264330177018
Option 1 ID : 264330694269
Option 2 ID : 264330694268
Option 3 ID : 264330694267
Option 4 ID : 264330694270
Status : Not Answered
Chosen Option : --

Q.20 The famous south Indian epic 'Silappadikaram' was originally written in _____ language.

- Ans 1. Sanskrit
 2. Tamil
 3. Malayalam
 4. Telugu

Question ID : 264330119476
Option 1 ID : 264330468189
Option 2 ID : 264330468190
Option 3 ID : 264330468188
Option 4 ID : 264330468187
Status : Answered
Chosen Option : 2

Q.21 Jhali is the folk dance of which Indian state?

- Ans 1. Uttar Pradesh
 2. Madhya Pradesh
 3. Bihar
 4. Himachal Pradesh

Question ID : 264330141326
Option 1 ID : 264330553639
Option 2 ID : 264330553640
Option 3 ID : 264330553642
Option 4 ID : 264330553641
Status : Not Answered
Chosen Option : --

Q.22 Musician Bhajan Sopori was a Santoor maestro from the _____ Gharana.

- Ans 1. Maihar
 2. Benaras
 3. Punjab
 4. Sufiana

Question ID : 264330112683
Option 1 ID : 264330442819
Option 2 ID : 264330442820
Option 3 ID : 264330442818
Option 4 ID : 264330442817
Status : Answered
Chosen Option : 2

Q.23 Which of the following is NOT a feature of India's parliamentary government?

- Ans 1. Dissolution of the Rajya Sabha
 2. Presence of nominal and real executives
 3. Membership of the ministers in the legislature
 4. Majority party rule

Question ID : 264330114134
Option 1 ID : 264330448624
Option 2 ID : 264330448621
Option 3 ID : 264330448623
Option 4 ID : 264330448622
Status : Answered
Chosen Option : 2

Q.24 The Harappan city of Dholavira was divided into how many parts?

- Ans 1. 2
 2. 4
 3. 3
 4. 5

Question ID : 264330109641
Option 1 ID : 264330430841
Option 2 ID : 264330430843
Option 3 ID : 264330430842
Option 4 ID : 264330430844
Status : Answered
Chosen Option : 1

Q.25 Identify the crop which is grown in Rabi season in North India from the following.

- Ans 1. Rice
 2. Cotton
 3. Gram
 4. Bajra

Question ID : 264330181455
Option 1 ID : 264330711743
Option 2 ID : 264330711744
Option 3 ID : 264330711746
Option 4 ID : 264330711745
Status : Not Answered
Chosen Option : --

Q.26 'Freedom is my birth right and I shall have it'. Who among the following said this?

- Ans 1. Lala Lajpat Rai
 2. Bal Gangadhar Tilak
 3. Aurobindo Ghosh
 4. Bipin Chandra pal

Question ID : 264330114872
Option 1 ID : 264330451575
Option 2 ID : 264330451574
Option 3 ID : 264330451576
Option 4 ID : 264330451573
Status : Answered
Chosen Option : 3

Q.27 The first battle of Panipat was fought between Babur and _____ .

- Ans 1. Ibrahim Lodhi
 2. Maharana Pratap
 3. Muhammad bin Tughlaq
 4. Sikandar Lodhi

Question ID : 264330118984
Option 1 ID : 264330466593
Option 2 ID : 264330466594
Option 3 ID : 264330466592
Option 4 ID : 264330466591
Status : Answered
Chosen Option : 1

Q.28 The period between two FIFA Football World Cups is _____.

- Ans 1. 3 years
 2. 5 years
 3. 4 years
 4. 6 years

Question ID : 264330134259
Option 1 ID : 264330526031
Option 2 ID : 264330526033
Option 3 ID : 264330526032
Option 4 ID : 264330526034
Status : Answered
Chosen Option : 3

Q.29 Ajita Srivastava is a famous folk singer from _____ and she received the Padma Shri in 2022.

- Ans 1. Maharashtra
 2. Gujarat
 3. Madhya Pradesh
 4. Uttar Pradesh

Question ID : 264330111960
Option 1 ID : 264330439927
Option 2 ID : 264330439928
Option 3 ID : 264330439925
Option 4 ID : 264330439926
Status : Not Answered
Chosen Option : --

Q.30 The Katakhal, Jiri, Chiri, Modhura, Longai, Sonai, Rukni and Singla are the main tributaries of which river?

- Ans 1. Chambal
 2. Barak
 3. Damodar
 4. Ghaghra

Question ID : 264330113523
Option 1 ID : 264330446179
Option 2 ID : 264330446177
Option 3 ID : 264330446178
Option 4 ID : 264330446180
Status : Not Answered
Chosen Option : --

Q.31 In India, which mode of transport provide door to door services?

- Ans 1. Waterways
 2. Road transport
 3. Railways
 4. Airways

Question ID : 264330119885
Option 1 ID : 264330469816
Option 2 ID : 264330469818
Option 3 ID : 264330469815
Option 4 ID : 264330469817
Status : Not Answered
Chosen Option : --

Q.32 A novel based on the story of a family named 'Fasting, Feasting' was written by whom among the following?

- Ans 1. Anita Desai
 2. Arundhati Roy
 3. Arvind Adiga
 4. Kiran Desai

Question ID : 26433064228
Option 1 ID : 264330251507
Option 2 ID : 264330251504
Option 3 ID : 264330251506
Option 4 ID : 264330251505
Status : Answered
Chosen Option : 3

Q.33 Pradhan Mantri Awas Yojana–Urban (PMAY-U) was launched in the year _____ by the Government of India.

- Ans 1. 2021
 2. 2015
 3. 2017
 4. 2019

Question ID : 264330120480
Option 1 ID : 264330472174
Option 2 ID : 264330472171
Option 3 ID : 264330472172
Option 4 ID : 264330472173
Status : Answered
Chosen Option : 4

Q.34 Which of the following Articles of the Indian Constitution is related with provision for just and humane conditions of work and maternity relief?

- Ans 1. Article 42
 2. Article 45
 3. Article 44
 4. Article 43

Question ID : 264330180058
Option 1 ID : 264330706215
Option 2 ID : 264330706218
Option 3 ID : 264330706217
Option 4 ID : 264330706216
Status : Answered
Chosen Option : 4

Q.35 Article 39A of the Constitution of India gives the idea of:

- Ans 1. right to work, to education and to public assistance in certain cases
 2. provisions for just and humane conditions of work
 3. living wage, etc., for workers
 4. equal justice and free legal aid

Question ID : 264330110802
Option 1 ID : 264330435487
Option 2 ID : 264330435485
Option 3 ID : 264330435488
Option 4 ID : 264330435486
Status : Answered
Chosen Option : 4

Q.36 Who is the Head of the Secretariat of each house of the Parliament?

- Ans 1. Speaker
 2. Secretary General
 3. President
 4. Deputy Speaker

Question ID : 264330173533
Option 1 ID : 264330680611
Option 2 ID : 264330680612
Option 3 ID : 264330680614
Option 4 ID : 264330680613
Status : Answered
Chosen Option : 3

Q.37 According to the census of India 2011, which group of states from the following recorded the highest population?

- Ans 1. Maharashtra and Bihar
 2. Tamil Nadu and Karnataka
 3. West Bengal and Madhya Pradesh
 4. Bihar and West Bengal

Question ID : 264330167028
Option 1 ID : 264330655116
Option 2 ID : 264330655118
Option 3 ID : 264330655115
Option 4 ID : 264330655117
Status : Answered
Chosen Option : 1

Q.38 Which of the following dances of South India is known as peacock dance?

- Ans 1. Garadi
 2. Padayani
 3. Mayilattam
 4. Kummi

Question ID : 264330110423
Option 1 ID : 264330433972
Option 2 ID : 264330433969
Option 3 ID : 264330433970
Option 4 ID : 264330433971
Status : Not Answered
Chosen Option : --

Q.39 Which of the following statements about Indian river systems is correct?

- Ans 1. The Mahanadi river flows through the state of Chhattisgarh only.
2. Godavari river flows through Haryana state.
3. Yamuna River is a tributary of Ganga River.
4. Sone River originates in Punjab.

Question ID : 264330174350
Option 1 ID : 264330683819
Option 2 ID : 264330683821
Option 3 ID : 264330683822
Option 4 ID : 264330683820
Status : Answered
Chosen Option : 1

Q.40 Which of the following statements is true with regard to preference given in most Five-Year Plans in India?

- Ans 1. Extensive Promotion of private sector entrepreneurship
2. Control of prices
3. Regulation of financial sector
4. Investment in basic and heavy industries

Question ID : 264330113540
Option 1 ID : 264330446246
Option 2 ID : 264330446247
Option 3 ID : 264330446248
Option 4 ID : 264330446245
Status : Answered
Chosen Option : 4

Q.41 When was Singer and Nicolson's fluid mosaic model accepted as the foundational model for the interpretation of existing data on membrane proteins and lipids, and their dynamics?

- Ans 1. 1952
2. 1972
3. 1942
4. 1982

Question ID : 264330141717
Option 1 ID : 264330555188
Option 2 ID : 264330555187
Option 3 ID : 264330555190
Option 4 ID : 264330555189
Status : Answered
Chosen Option : 1

Q.42 How many temples and monasteries are there in Ellora caves?

- Ans 1. 18
2. 29
3. 34
4. 23

Question ID : 264330106253
Option 1 ID : 264330417314
Option 2 ID : 264330417313
Option 3 ID : 264330417316
Option 4 ID : 264330417315
Status : Answered
Chosen Option : 1

Q.43 Which of the following gave the British Indian government enormous powers to repress political activities, and allowed the detention of political prisoners without trial for two years?

- Ans
- 1. Indian Slavery Act
 - 2. Rowlatt Act
 - 3. Indian Contract Act
 - 4. Negotiable Instruments Act

Question ID : 264330119489
Option 1 ID : 264330468240
Option 2 ID : 264330468242
Option 3 ID : 264330468241
Option 4 ID : 264330468239
Status : Answered
Chosen Option : 2

Q.44 Autotrophs can fix _____.

- Ans
- 1. carbon dioxides
 - 2. carbon monoxide
 - 3. methane
 - 4. oxygen

Question ID : 264330120070
Option 1 ID : 264330470537
Option 2 ID : 264330470536
Option 3 ID : 264330470538
Option 4 ID : 264330470535
Status : Not Answered
Chosen Option : --

Q.45 Who among the following was the first President of the Indian Olympic Association (IOA)?

- Ans
- 1. Sir Dorabji Tata
 - 2. Dr. AG Noehren
 - 3. Raja Bhalender Singh
 - 4. Maharaja Bhupinder Singh

Question ID : 264330118442
Option 1 ID : 264330465171
Option 2 ID : 264330465169
Option 3 ID : 264330465172
Option 4 ID : 264330465170
Status : Not Answered
Chosen Option : --

Q.46 Ram Sahay Panday got Padma Shri for promoting the dance form Raai from Bundelkhand region. Which State does this dance form belong to?

- Ans
- 1. Rajasthan
 - 2. Madhya Pradesh
 - 3. Bihar
 - 4. Chhattisgarh

Question ID : 2643308666
Option 1 ID : 264330340308
Option 2 ID : 264330340305
Option 3 ID : 264330340307
Option 4 ID : 264330340306
Status : Answered
Chosen Option : 2

Q.47 Reserve Bank of India (RBI) was established on:

- Ans
- 1. 1 April 1945
 - 2. 1 April 1925
 - 3. 1 April 1955
 - 4. 1 April 1935

Question ID : 264330110162
Option 1 ID : 264330432927
Option 2 ID : 264330432925
Option 3 ID : 264330432928
Option 4 ID : 264330432926
Status : Answered
Chosen Option : 4

Q.48 निम्नलिखित में से किसने मध्य भारत में चमड़ा श्रमिकों की बेहतरी के लिए सतनामी आंदोलन शुरू किया था?

- Ans
- 1. बी.आर. अंबेडकर
 - 2. महात्मा गांधी
 - 3. गुरु घासीदास
 - 4. स्वामी विवेकानंद

Question ID : 264330119024
Option 1 ID : 264330466751
Option 2 ID : 264330466752
Option 3 ID : 264330466754
Option 4 ID : 264330466753
Status : Answered
Chosen Option : 3

Q.49 In a volleyball game, 'libero' is a _____.

- Ans
- 1. specialised defensive player
 - 2. blocking expert
 - 3. specialised attacking player
 - 4. smashing expert

Question ID : 264330118484
Option 1 ID : 264330465337
Option 2 ID : 264330465339
Option 3 ID : 264330465340
Option 4 ID : 264330465338
Status : Not Answered
Chosen Option : --

Q.50 The parliamentary system of the Government in India is based on the pattern of which of the following Parliamentary Governments?

- Ans
- 1. Russian
 - 2. Canadian
 - 3. USA
 - 4. British

Question ID : 264330173469
 Option 1 ID : 264330680357
 Option 2 ID : 264330680356
 Option 3 ID : 264330680355
 Option 4 ID : 264330680358
 Status : Not Answered
 Chosen Option : --

Section : Reasoning

Q.1 Which figure should replace the question mark (?) if the series were to be continued?

O 8	8 =	X O	O A	
= A	O ▽	A 8	X ▽	?
X ▽	A X	= ▽	8 =	

Ans

- 1.

= 8
▽ X
A O
- 2.

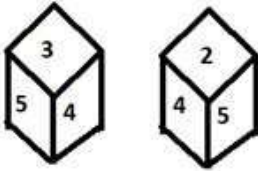
= 8
O A
▽ X
- 3.

= X
8 O
A ▽
- 4.

= 8
X O
A ▽

Question ID : 264330130801
 Option 1 ID : 264330512317
 Option 2 ID : 264330512316
 Option 3 ID : 264330512315
 Option 4 ID : 264330512318
 Status : Answered
 Chosen Option : 2

Q.2 Six numbers 1, 2, 3, 4, 5 and 6 are written on different faces of a dice. Two positions of this dice are shown in the figure. Find the number on the face opposite to 2.



Ans 1. 3

2. 4

3. 1

4. 6

Question ID : 264330117893

Option 1 ID : 264330463389

Option 2 ID : 264330463388

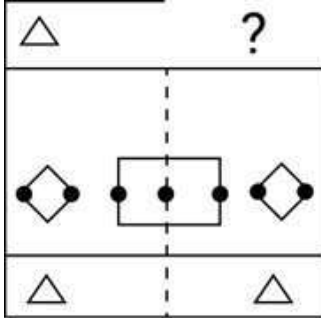
Option 3 ID : 264330463387

Option 4 ID : 264330463390

Status : Answered

Chosen Option : 3

Q.3 Select the figure from the given options that will replace the question mark (?) in the figure given below to complete the pattern.



Ans

1.

2.

3.

4.

Question ID : 264330116613

Option 1 ID : 264330458540

Option 2 ID : 264330458537

Option 3 ID : 264330458539

Option 4 ID : 264330458538

Status : Answered

Chosen Option : 2

Q.4 Which two signs should be interchanged to make the given equation correct?
 $156 \div 12 - 4 \times 65 + 87 = 74$

- Ans
- 1. + and -
 - 2. = and \times
 - 3. \times and -
 - 4. + and =

Question ID : 26433090221
Option 1 ID : 264330354361
Option 2 ID : 264330354364
Option 3 ID : 264330354362
Option 4 ID : 264330354363
Status : Answered
Chosen Option : 3

Q.5 छह दोस्त - A, B, C, D, E और F - एक वृत्ताकार मेज के परितः मेज के केंद्र की ओर मुख करके बैठे थे। वे एक दूसरे से समान दूरी पर बैठे थे। A, B के दाएं तीसरे स्थान पर बैठा था। E, D के ठीक बाएं बैठा था। A, F और D के ठीक बीच में बैठा था। निम्नलिखित में से कौन D के बाएं तीसरे स्थान पर बैठा था?

- Ans
- 1. C
 - 2. E
 - 3. A
 - 4. F

Question ID : 26433087005
Option 1 ID : 264330341661
Option 2 ID : 264330341663
Option 3 ID : 264330341664
Option 4 ID : 264330341662
Status : Answered
Chosen Option : 1

Q.6 Select the set in which the numbers are related in the same way as are the numbers of the following sets.

(NOTE : Operations should be performed on the whole numbers, without breaking down the numbers into its constituent digits. E.g. 13 – Operations on 13 such as adding/deleting/multiplying etc. to 13 can be performed. Breaking down 13 into 1 and 3 and then performing mathematical operations on 1 and 3 is NOT allowed)
(39, 130, 13)
(45, 150, 15)

- Ans
- 1. (39, 120, 17)
 - 2. (25, 60, 12)
 - 3. (35, 125, 10)
 - 4. (40, 75, 15)

Question ID : 26433097437
Option 1 ID : 264330382439
Option 2 ID : 264330382437
Option 3 ID : 264330382440
Option 4 ID : 264330382438
Status : Not Answered
Chosen Option : --

Q.7 Which of the following terms will replace the question mark (?) in the given series?
MAF, PCG, SEH, ?, YIJ

- Ans
- 1. UFI
 - 2. RHI
 - 3. WHI
 - 4. VGI

Question ID : 264330102169
 Option 1 ID : 264330401143
 Option 2 ID : 264330401141
 Option 3 ID : 264330401144
 Option 4 ID : 264330401142
 Status : Answered
 Chosen Option : 4

Q.8 Which figure should replace the question mark (?) in the following series to continue the pattern?

D	Z	V	□	D	V	V	□	D	=	V	D	
	=			Z		Z		□				?
□			=		=		Z					

Ans

1.

D	Z	=
	V	
	□	

2.

D	=	V
	□	
	Z	

3.

D	=	V
	Z	
	□	

4.

=	Z	D
	V	
	□	

Question ID : 264330129629
 Option 1 ID : 264330507883
 Option 2 ID : 264330507882
 Option 3 ID : 264330507885
 Option 4 ID : 264330507884
 Status : Answered
 Chosen Option : 2

Q.9 In a certain code language, 'WAR' is written as '39' and 'ZIP' is written as '30'. How will 'YES' be written in that language?

- Ans 1. 36
 2. 34
 3. 32
 4. 37

Question ID : 26433089410

Option 1 ID : 264330351143

Option 2 ID : 264330351142

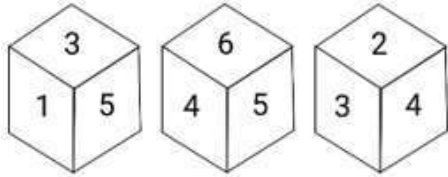
Option 3 ID : 264330351141

Option 4 ID : 264330351144

Status : Answered

Chosen Option : 3

Q.10 Three different positions of the same dice are shown. Find the number on the face opposite to the face showing '4'.



- Ans 1. 2
 2. 5
 3. 6
 4. 1

Question ID : 264330112034

Option 1 ID : 264330440223

Option 2 ID : 264330440221

Option 3 ID : 264330440222

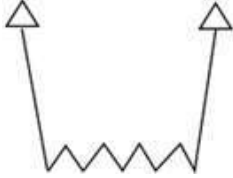
Option 4 ID : 264330440224

Status : Answered

Chosen Option : 4

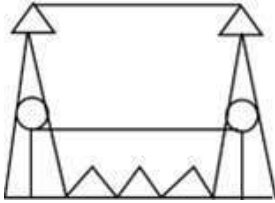
Adda247

Q.11 Select the option in which the given figure is embedded (rotation is NOT allowed).

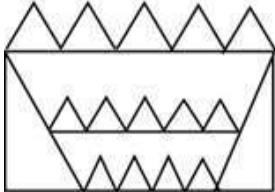


Ans

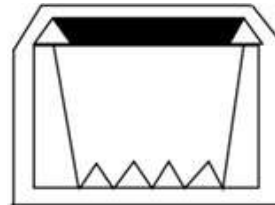
1.



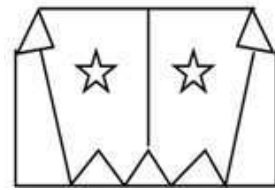
2.



3.



4.



Question ID : 264330111676

Option 1 ID : 264330438792

Option 2 ID : 264330438790

Option 3 ID : 264330438791

Option 4 ID : 264330438789

Status : Answered

Chosen Option : 3

Q.12 Read the given statements and conclusions carefully. Assuming that the information given in the statements is true, even if it appears to be at variance with commonly known facts, decide which of the given conclusions logically follow(s) from the statements.

Statements:

Some shoes are shirts.

All shirts are jackets.

Conclusions:

I. Some shoes are jackets.

II. All jackets are shoes.

Ans 1. Only conclusion II follows

2. Only conclusion I follows

3. Neither conclusion I nor II follows

4. Both conclusions I and II follow

Question ID : 26433068293

Option 1 ID : 264330267685

Option 2 ID : 264330267684

Option 3 ID : 264330267687

Option 4 ID : 264330267686

Status : Answered

Chosen Option : 2


Q.13 Select the option that is related to the fourth number in the same way as the first number is related to the second number and the fifth number is related to the sixth number.

17 : 69 :: ? : 109 :: 21 : 85

- Ans
- 1. 40
 - 2. 27
 - 3. 37
 - 4. 31

Question ID : 26433052023
Option 1 ID : 264330203397
Option 2 ID : 264330203394
Option 3 ID : 264330203396
Option 4 ID : 264330203395
Status : Answered
Chosen Option : 2

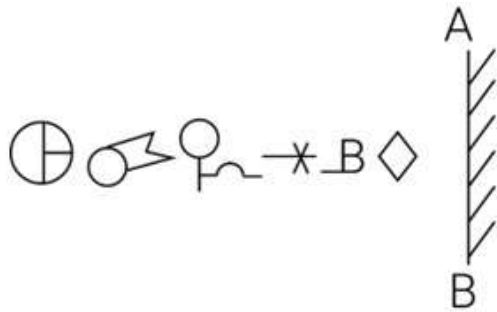
Q.14 How many triangles are there in the given figure?



- Ans
- 1. 30
 - 2. 28
 - 3. 24
 - 4. 32

Question ID : 26433080664
Option 1 ID : 264330316591
Option 2 ID : 264330316590
Option 3 ID : 264330316592
Option 4 ID : 264330316589
Status : Answered
Chosen Option : 1

Q.15 Select the correct mirror image of the given figure when the mirror is placed at 'AB' as shown.



Ans

- 1.
- 2.
- 3.
- 4.

Question ID : 264330114698

Option 1 ID : 264330450880

Option 2 ID : 264330450877

Option 3 ID : 264330450879

Option 4 ID : 264330450878

Status : Answered

Chosen Option : 3

Q.16 Three different positions of the same dice are shown, the faces of which are marked with the letters A, B, C, D, E and F. Select the letter that will be on the face opposite to the face having the letter 'D'.



- Ans
- 1. F
 - 2. A
 - 3. C
 - 4. B

Question ID : 264330117422

Option 1 ID : 264330461732

Option 2 ID : 264330461729

Option 3 ID : 264330461731

Option 4 ID : 264330461730

Status : Answered

Chosen Option : 1

Q.17 Select the option that is related to the fifth letter cluster in the same way as the second letter cluster is related to the first letter cluster and the fourth letter cluster is related to the third letter cluster.

YDVJ : PHMN :: FJBE : WNSI :: PXYS : ?

- Ans
- 1. PLEX
 - 2. GMNA
 - 3. JFBT
 - 4. GBPW

Question ID : 26433074692

Option 1 ID : 264330292856

Option 2 ID : 264330292859

Option 3 ID : 264330292857

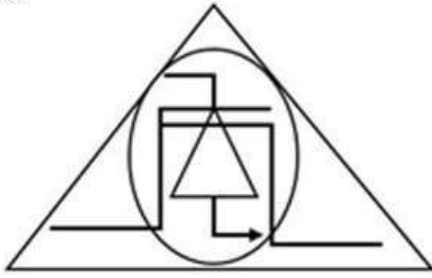
Option 4 ID : 264330292858

Status : Answered

Chosen Option : 4



Q.18 Select the option that is embedded in the given figure (rotation is NOT allowed).

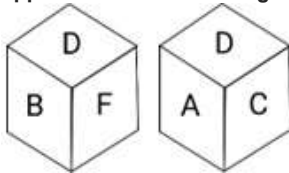


Ans

- ✗ 1.
- ✗ 2.
- ✓ 3.
- ✗ 4.

Question ID : 26433082892
Option 1 ID : 264330325402
Option 2 ID : 264330325404
Option 3 ID : 264330325401
Option 4 ID : 264330325403
Status : Answered
Chosen Option : 3

Q.19 Six letters A, B, C, D, E and F are written on different faces of a dice. Two different positions of this dice are shown in the figure. Select the letter that will be on the face opposite to the one having E.



- Ans 1. D
 2. C
 3. F
 4. A

Question ID : 264330121788
Option 1 ID : 264330477323
Option 2 ID : 264330477325
Option 3 ID : 264330477326
Option 4 ID : 264330477324
Status : Answered
Chosen Option : 1

Q.20 Select the number from the given options that can replace the question mark (?) in the following series.
40, 50, 30, 60, 20, ?

- Ans 1. 40
 2. 70
 3. 50
 4. 80

Question ID : 264330106384
Option 1 ID : 264330417840
Option 2 ID : 264330417838
Option 3 ID : 264330417839
Option 4 ID : 264330417837
Status : Answered
Chosen Option : 2

Q.21 Which figure should replace the question mark (?) if the following series were to be continued?

L O T R	R T = E	S R T =	= T E A	4 = T E	
=	O	E	R	A	?
M A D E	L D A M	O L D A	S D L O	R S D L	

Ans

✗ 1.

R T A 4
=
L D S E

✓ 2.

E T A L
=
4 D S R

✗ 3.

E T A 4
=
L R S D

✗ 4.

L 4 = T
E
A R S D

Question ID : 264330103895

Option 1 ID : 264330407882

Option 2 ID : 264330407884

Option 3 ID : 264330407883

Option 4 ID : 264330407881

Status : Answered

Chosen Option : 2

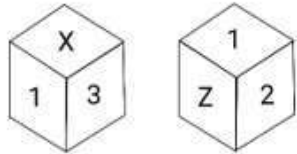
Q.22 Select the correct mirror image of the given figure when the mirror is placed at PQ as shown below.



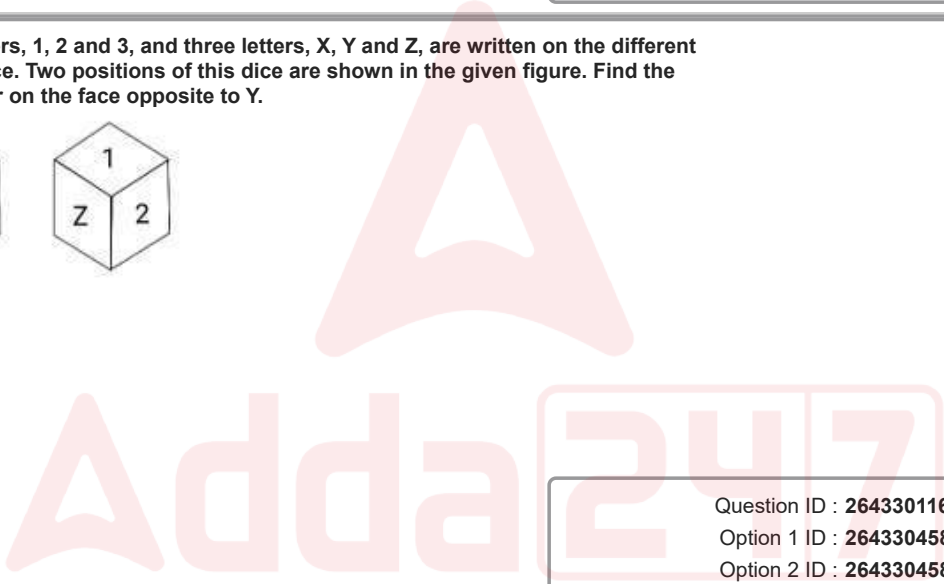
- Ans
- 1.
 - 2.
 - 3.
 - 4.

Question ID : 26433080771
 Option 1 ID : 264330317017
 Option 2 ID : 264330317018
 Option 3 ID : 264330317020
 Option 4 ID : 264330317019
 Status : Answered
 Chosen Option : 4

Q.23 Three numbers, 1, 2 and 3, and three letters, X, Y and Z, are written on the different faces of a dice. Two positions of this dice are shown in the given figure. Find the letter/number on the face opposite to Y.



- Ans
- 1. X
 - 2. Z
 - 3. 3
 - 4. 1



Question ID : 264330116608
 Option 1 ID : 264330458520
 Option 2 ID : 264330458519
 Option 3 ID : 264330458518
 Option 4 ID : 264330458517
 Status : Answered
 Chosen Option : 4

Q.24 Select the correct mirror image of the given figure when the mirror is placed at PQ as shown below.

//\|||=+&%((()\$))

P
|
Q

Ans

✗ 1. ((?)()\o\°&+==//||\|

✗ 2. ((?)((\o\°&+==||/\|

✓ 3. ((?)()\o\°&+==||/\|

✗ 4. ((?)()\o\°&+==||//\|

Question ID : 26433082028

Option 1 ID : 264330321947

Option 2 ID : 264330321945

Option 3 ID : 264330321946

Option 4 ID : 264330321948

Status : Answered

Chosen Option : 3

Q.25 Select the correct combination of mathematical signs that can sequentially replace the * signs and balance the given expression.

13 * 7 * 32 * 56 * 4 * 73

Ans ✗ 1. +, x, -, ÷, =

✓ 2. x, -, +, ÷, =

✗ 3. -, +, +, x, =

✗ 4. -, x, +, ÷, =

Question ID : 26433074788

Option 1 ID : 264330293242

Option 2 ID : 264330293240

Option 3 ID : 264330293241

Option 4 ID : 264330293243

Status : Answered

Chosen Option : 2

Section : Numerical Ability

Q.1

What is the value of $\frac{0.061 \times 0.061 \times 0.061 + 0.031 \times 0.031 \times 0.031}{0.061 \times 0.061 - 0.061 \times 0.031 + 0.031 \times 0.031}$?

- Ans
- 1. 0.092
 - 2. 0.0081
 - 3. 0.27
 - 4. 1.8

Question ID : 264330104342
Option 1 ID : 264330409669
Option 2 ID : 264330409670
Option 3 ID : 264330409671
Option 4 ID : 264330409672
Status : Answered
Chosen Option : 1

Q.2 A, B and C can complete a piece of work in 8, 10 and 12 days, respectively. In how many days would all of them complete the same work, working together?

- Ans
- 1. $\frac{123}{37}$ days
 - 2. $\frac{120}{37}$ days
 - 3. $\frac{130}{37}$ days
 - 4. $\frac{128}{37}$ days

Question ID : 264330103628
Option 1 ID : 264330406819
Option 2 ID : 264330406820
Option 3 ID : 264330406817
Option 4 ID : 264330406818
Status : Not Answered
Chosen Option : --

Q.3 A solid copper sphere of diameter 30 cm is drawn into a wire of diameter 10 cm. Find the length of the wire (in cm).

- Ans
- 1. 180
 - 2. 120
 - 3. 240
 - 4. 300

Question ID : 264330112445
Option 1 ID : 264330441868
Option 2 ID : 264330441865
Option 3 ID : 264330441866
Option 4 ID : 264330441867
Status : Answered
Chosen Option : 4

Q.4 If 45% of Ram's money is added to 50% of Soham's money, then the total amount will be 86% of Soham's money. What percentage of Ram's money did Soham have?

- Ans
- 1. 137%
 - 2. 85%
 - 3. 125%
 - 4. 95%

Question ID : 264330131332
Option 1 ID : 264330514442
Option 2 ID : 264330514439
Option 3 ID : 264330514440
Option 4 ID : 264330514441
Status : Not Answered
Chosen Option : --

Q.5 What is the product of the 5th prime number and the prime number immediately greater than 100?

- Ans
- 1. 1067
 - 2. 1717
 - 3. 1111
 - 4. 1261

Question ID : 264330104345
Option 1 ID : 264330409681
Option 2 ID : 264330409684
Option 3 ID : 264330409682
Option 4 ID : 264330409683
Status : Answered
Chosen Option : 3

Q.6 A person borrows ₹5,000 for 2 years at 4% p.a. simple interest. He immediately lends it to another person at $\frac{25}{4}$ % p.a. for 2 years. Find his gain (in ₹) in the transaction.

- Ans
- 1. 225
 - 2. 250
 - 3. 275
 - 4. 200

Question ID : 264330119421
Option 1 ID : 264330467971
Option 2 ID : 264330467972
Option 3 ID : 264330467974
Option 4 ID : 264330467973
Status : Not Answered
Chosen Option : --

Q.7 The initial population of a country is 1,87,500. If the birth and the death rates are 13% and 9%, respectively, then find the population of the country after 2 years.

- Ans
- 1. 2,02,700
 - 2. 2,02,900
 - 3. 2,03,000
 - 4. 2,02,800

Question ID : 264330106009
Option 1 ID : 264330416337
Option 2 ID : 264330416339
Option 3 ID : 264330416340
Option 4 ID : 264330416338
Status : Not Answered
Chosen Option : --

Q.8 A trip to a destination is made in the following way:
a) 550 km by train at an average speed of 55 km/h
b) 4500 km by plane at an average speed of 500 km/h
c) 400 km by boat at an average speed of 25 km/h
d) 55 km by auto at an average speed of 35 km/h
What is the average speed for the entire journey?

- Ans
- 1. 3300 km/h
 - 2. 9600 km/h
 - 3. $121\frac{64}{25}$ km/h
 - 4. $150\frac{135}{256}$ km/h

Question ID : 264330118133
Option 1 ID : 264330464350
Option 2 ID : 264330464348
Option 3 ID : 264330464349
Option 4 ID : 264330464347
Status : Not Answered
Chosen Option : --

Q.9 If k , $(k^2 + 3)$ and $(k^3 + 5)$ are prime numbers, then what will be the value of k ?

- Ans
- 1. 4
 - 2. 3
 - 3. 7
 - 4. 2

Question ID : 264330104277
Option 1 ID : 264330409410
Option 2 ID : 264330409411
Option 3 ID : 264330409409
Option 4 ID : 264330409412
Status : Answered
Chosen Option : 3

Q.10 If the price of tea goes up by 28%, then by what percentage (correct to the nearest whole number) should its consumption be reduced so that the expenditure on it remains unchanged?

Ans 1. 22%

2. 27%

3. 21%

4. 28%

Question ID : 264330118051

Option 1 ID : 264330464019

Option 2 ID : 264330464021

Option 3 ID : 264330464022

Option 4 ID : 264330464020

Status : Not Answered

Chosen Option : --

Q.11 What is the area of a triangle (in "cm²") having sides of length 24 cm, 17 cm and 9 cm?

Ans 1. $40\sqrt{2}$

2. $35\sqrt{2}$

3. $20\sqrt{2}$

4. $40\sqrt{3}$

Question ID : 264330126533

Option 1 ID : 264330495807

Option 2 ID : 264330495806

Option 3 ID : 264330495805

Option 4 ID : 264330495804

Status : Not Answered

Chosen Option : --

Q.12 If marked price is 75% more than the cost price and a discount of 40% is allowed on the marked price, then percentage profit is:

Ans 1. 5%

2. 8%

3. 3%

4. 7%

Question ID : 264330126187

Option 1 ID : 264330494423

Option 2 ID : 264330494421

Option 3 ID : 264330494422

Option 4 ID : 264330494420

Status : Not Answered

Chosen Option : --

Q.13 Find the average of the first five composite numbers.

- Ans
- 1. 7.8
 - 2. 6.8
 - 3. 8.2
 - 4. 7.4

Question ID : 264330131439
Option 1 ID : 264330514861
Option 2 ID : 264330514859
Option 3 ID : 264330514862
Option 4 ID : 264330514860
Status : Not Answered
Chosen Option : --

Q.14 A vertical pole of length 8.3 m casts a shadow of length 4.15 m. Find the height of the tree that casts a 40 m long shadow under similar conditions (in m).

- Ans
- 1. 60
 - 2. 70
 - 3. 100
 - 4. 80

Question ID : 264330168549
Option 1 ID : 264330661009
Option 2 ID : 264330661008
Option 3 ID : 264330661007
Option 4 ID : 264330661010
Status : Not Answered
Chosen Option : --

Q.15 Arun bought 150 guavas for ₹525 and sold them at the rate of ₹36 per dozen. What is the profit or loss percentage of Arun (correct up to two decimal places)?

- Ans
- 1. 16.67% Loss
 - 2. 14.29% Profit
 - 3. 16.67% Profit
 - 4. 14.29% Loss

Question ID : 264330103952
Option 1 ID : 264330408112
Option 2 ID : 264330408109
Option 3 ID : 264330408111
Option 4 ID : 264330408110
Status : Not Answered
Chosen Option : --

Q.1 Which of the following is the foundation of data communication on the web, enabling the transfer of web page content?

- Ans 1. Hypertext Transfer Protocol
 2. Domain Name Server
 3. World Wide Web
 4. Uniform Resource Locator

Question ID : 264330180801
Option 1 ID : 264330709167
Option 2 ID : 264330709169
Option 3 ID : 264330709168
Option 4 ID : 264330709170
Status : Answered
Chosen Option : 1

Q.2 एमएस वर्ड 365 (MS Word 365) से संबंधित निम्न कथनों के आधार पर कौन-सा विकल्प सही है?

- 1) Ctrl + X का उपयोग डॉक्यूमेंट को कॉपी करने के लिए किया जाता है।
2) Ctrl+V का उपयोग डॉक्यूमेंट को मूव करने के लिए किया जाता है।

- Ans 1. दोनों (1) और (2)
 2. केवल (1)
 3. न तो (1) और न ही (2)
 4. केवल (2)

Question ID : 264330175969
Option 1 ID : 264330690173
Option 2 ID : 264330690171
Option 3 ID : 264330690174
Option 4 ID : 264330690172
Status : Answered
Chosen Option : 2

Q.3 Which of the following shortcut keys is used in MS Excel 365 to make the cell in edit mode, allowing you to make changes?

- Ans 1. Ctrl + F1
 2. F1
 3. F2
 4. Ctrl + F2

Question ID : 264330180413
Option 1 ID : 264330707622
Option 2 ID : 264330707621
Option 3 ID : 264330707620
Option 4 ID : 264330707619
Status : Answered
Chosen Option : 4

Q.4 एमएस एक्सेल 365 (MS Excel 365) का निम्नलिखित में से कौन-सा फ़ंक्शन, प्रत्येक वैल्यू (value) के बीच एक स्पेस को छोड़ते हुए अनियमित स्पेस को हटाता है?

- Ans
- 1. AVERAGE
 - 2. SUM
 - 3. VLOOKUP
 - 4. TRIM

Question ID : 264330180405

Option 1 ID : 264330707589

Option 2 ID : 264330707587

Option 3 ID : 264330707590

Option 4 ID : 264330707588

Status : Not Answered

Chosen Option : --

Q.5 MS-Word 365 में निम्नलिखित में से किस विकल्प से आप चयनित टेक्स्ट के फ़ॉन्ट साइज़ को, फ़ॉन्ट साइज़ सूची में उपलब्ध अगले बड़े साइज़ में परिवर्तित कर सकते हैं?

- Ans
- 1. इटैलिक्स
 - 2. बोल्ड
 - 3. फ़ॉन्ट साइज़ बढ़ाएँ
 - 4. फ़ॉन्ट साइज़ कम करें

Question ID : 264330173354

Option 1 ID : 264330679898

Option 2 ID : 264330679897

Option 3 ID : 264330679895

Option 4 ID : 264330679896

Status : Answered

Chosen Option : 3

Q.6 In MS Excel 365, what is the term for the area that contains specific and formatted data in MS Excel for printing?

- Ans
- 1. View
 - 2. Print preview
 - 3. Print area
 - 4. Print margin

Question ID : 264330182119

Option 1 ID : 264330714315

Option 2 ID : 264330714317

Option 3 ID : 264330714318

Option 4 ID : 264330714316

Status : Answered

Chosen Option : 3

Q.7 In MS Word 365 What is the primary purpose of using bullets and numbering in document formatting?

- Ans
- 1. To indicate the importance of specific text.
 - 2. To organize information into lists or sequences.
 - 3. To adjust the margins and spacing of the document.
 - 4. To highlight text with a different font or colour.

Question ID : 264330173328
Option 1 ID : 264330679791
Option 2 ID : 264330679792
Option 3 ID : 264330679794
Option 4 ID : 264330679793
Status : Answered
Chosen Option : 3

Q.8 Which of the following is an example of a table style in Microsoft Word 365?

- Ans
- 1. Chicago Manual of Style
 - 2. Plain Grid
 - 3. MLA (Modern Language Association)
 - 4. APA (American Psychological Association)

Question ID : 264330174492
Option 1 ID : 264330684389
Option 2 ID : 264330684390
Option 3 ID : 264330684387
Option 4 ID : 264330684388
Status : Not Answered
Chosen Option : --

Q.9 निम्नलिखित में से कौन-सा, यूजर्स के बीच संदेशों के आदान-प्रदान के लिए एक कंप्यूटर-आधारित एप्लिकेशन है?

- Ans
- 1. ई-मेल (Email)
 - 2. क्रोम (chrome)
 - 3. बिंग (Bing)
 - 4. मोज़िला (Mozilla)

Question ID : 264330180792
Option 1 ID : 264330709131
Option 2 ID : 264330709132
Option 3 ID : 264330709133
Option 4 ID : 264330709134
Status : Answered
Chosen Option : 1

Q.10 नया खाली डॉक्यूमेंट बनाने का तरीका निम्नलिखित में से कौन-सा है?

- Ans
- 1. एमएस-एक्सेल
 - 2. एमएस आउटलुक
 - 3. एमएस-पावरप्वाइंट
 - 4. एमएस-वर्ड

Question ID : 264330178284
Option 1 ID : 264330699191
Option 2 ID : 264330699194
Option 3 ID : 264330699193
Option 4 ID : 264330699192
Status : Not Answered
Chosen Option : --



Constable Executive Male and Female in Delhi Police Examination 2023

Roll Number	
Candidate Name	
Venue Name	MIT Meerut
Exam Date	14/11/2023
Exam Time	3:00 PM - 4:30 PM
Subject	Constable Executive Male and Female in Delhi Police Examination 2023

Section : General Knowledge

Q.1 Cashpor Micro credit is a company that does NOT operate in the most backward districts of _____.

- Ans
- 1. Bihar
 - 2. Chhattisgarh
 - 3. Telangana
 - 4. Jharkhand

Question ID : 264330116497
Option 1 ID : 264330458073
Option 2 ID : 264330458076
Option 3 ID : 264330458075
Option 4 ID : 264330458074
Status : Not Answered
Chosen Option : --

Q.2 Which Article of the Constitution of India states that the President shall appoint judges of the Supreme Court under his hand and seal after consultation with such of the judges of the Supreme Court as the President may deem necessary?

- Ans
- 1. Article 124 (2)
 - 2. Article 120 (2)
 - 3. Article 134 (2)
 - 4. Article 142(2)

Question ID : 264330110826
Option 1 ID : 264330435584
Option 2 ID : 264330435582
Option 3 ID : 264330435581
Option 4 ID : 264330435583
Status : Answered
Chosen Option : 1

Q.3 Which of the following was replaced by the Green Revolution?

- Ans
- 1. Use of inorganic manures
 - 2. Use of seeds supplied by the government
 - 3. Use of groundwater for irrigation
 - 4. Use of organic manures

Question ID : 264330111765
Option 1 ID : 264330439146
Option 2 ID : 264330439148
Option 3 ID : 264330439147
Option 4 ID : 264330439145
Status : Answered
Chosen Option : 4

Q.4 According to Census of India 2011, the growth rate of Hindu population in the decade 2001-2011 was _____.

- Ans
- 1. 10.0%
 - 2. 16.8%
 - 3. 20.1%
 - 4. 8.6%

Question ID : 264330179510
Option 1 ID : 264330704039
Option 2 ID : 264330704040
Option 3 ID : 264330704041
Option 4 ID : 264330704042
Status : Not Answered
Chosen Option : --

Q.5 In which of the following years Cripps Mission offered Dominion Status to India?

- Ans
- 1. 1942
 - 2. 1934
 - 3. 1939
 - 4. 1945

Question ID : 264330118600
Option 1 ID : 264330465651
Option 2 ID : 264330465654
Option 3 ID : 264330465653
Option 4 ID : 264330465652
Status : Answered
Chosen Option : 1

Q.6 किस सिंड्रोम के कारण कंधों के बीच एक मोटा कूबड़, एक गोल चेहरा और त्वचा पर गुलाबी या बैंगनी खिंचाव के निशान हो जाते हैं?

- Ans
- 1. डाउन सिंड्रोम (Down syndrome)
 - 2. एंजेलमैन सिंड्रोम (Angelman syndrome)
 - 3. कुशिंग सिंड्रोम (Cushing syndrome)
 - 4. मार्फन सिंड्रोम (Marfan syndrome)

Question ID : 264330130986
Option 1 ID : 264330513056
Option 2 ID : 264330513055
Option 3 ID : 264330513057
Option 4 ID : 264330513058
Status : Not Answered
Chosen Option : --

Q.7 After independence, who had complete control over the established industries?

- Ans
- 1. Private sector
 - 2. Foreign investors
 - 3. Britishers
 - 4. Government

Question ID : 264330174149
Option 1 ID : 264330683038
Option 2 ID : 264330683036
Option 3 ID : 264330683035
Option 4 ID : 264330683037
Status : Answered
Chosen Option : 4

Q.8 Who propounded the philosophy of 'One Caste, One Religion, One God for all men'?

- Ans 1. Shree Narayana Guru
 2. Savitribai Phule
 3. Mahatma Gandhi
 4. Raja Ram Mohan Roy

Question ID : 264330114882
Option 1 ID : 264330451614
Option 2 ID : 264330451615
Option 3 ID : 264330451613
Option 4 ID : 264330451616
Status : Not Answered
Chosen Option : --

Q.9 What type of earthquake occurs when induced stresses around mine workings cause massive rocks to fly explosively from the mine face, creating seismic waves?

- Ans 1. Collapse earthquake
 2. Explosion earthquake
 3. Volcanic earthquake
 4. Tectonic earthquake

Question ID : 264330141510
Option 1 ID : 264330554377
Option 2 ID : 264330554376
Option 3 ID : 264330554378
Option 4 ID : 264330554375
Status : Answered
Chosen Option : 2

Q.10 The term 'monsoon' denotes the seasonal change in wind direction that occurs during which specific time period?

- Ans 1. Two decades
 2. Two months
 3. One day
 4. Year

Question ID : 264330174344
Option 1 ID : 264330683798
Option 2 ID : 264330683797
Option 3 ID : 264330683795
Option 4 ID : 264330683796
Status : Answered
Chosen Option : 2

Q.11 Sunlight is the main source of _____.

- Ans 1. Vitamin A
 2. Vitamin B
 3. Vitamin D
 4. Vitamin C

Question ID : 264330120064
Option 1 ID : 264330470511
Option 2 ID : 264330470514
Option 3 ID : 264330470512
Option 4 ID : 264330470513
Status : Answered
Chosen Option : 3

Q.12 In which of the following dance genres is Mallika Sarabhai an accomplished dancer?

- Ans
- 1. Kathakali and Odissi
 - 2. Odissi and Kuchipudi
 - 3. Bharatnatyam and Odissi
 - 4. Kuchipudi and Bharatnatyam

Question ID : 264330113797
Option 1 ID : 264330447276
Option 2 ID : 264330447273
Option 3 ID : 264330447274
Option 4 ID : 264330447275
Status : Answered
Chosen Option : 3

Q.13 In which of the following Indian states is Ghum Monastery located?

- Ans
- 1. Karnataka
 - 2. Himachal Pradesh
 - 3. West Bengal
 - 4. Arunachal Pradesh

Question ID : 264330109635
Option 1 ID : 264330430817
Option 2 ID : 264330430819
Option 3 ID : 264330430818
Option 4 ID : 264330430820
Status : Not Answered
Chosen Option : --

Q.14 In which language was the largest newspaper published in India in the year 2021-22?

- Ans
- 1. Hindi
 - 2. English
 - 3. Urdu
 - 4. Bengali

Question ID : 264330181434
Option 1 ID : 264330711660
Option 2 ID : 264330711659
Option 3 ID : 264330711661
Option 4 ID : 264330711662
Status : Not Answered
Chosen Option : --

Q.15 Which of the following statements is correct about privatisation?

Statements:

- I. It promotes economic efficiency
- II. It delimits the interference of bureaucracy
- III. It leads to market failure

Ans 1. Only statements I and II

2. Only statement II

3. Only statement III

4. Only statement I

Question ID : 26433066581

Option 1 ID : 264330260850

Option 2 ID : 264330260849

Option 3 ID : 264330260851

Option 4 ID : 264330260848

Status : Answered

Chosen Option : 4

Q.16 'नागे वाज़ा' जूडो में इस्तेमाल की जाने वाली एक _____ की तकनीक है।

Ans 1. दम घुटाने (चोकिंग)

2. जकड़ने (ग्रीपिंग)

3. दूर हटाने (थ्रोइंग)

4. पकड़े रखने (होल्डिंग)

Question ID : 264330118481

Option 1 ID : 264330465328

Option 2 ID : 264330465325

Option 3 ID : 264330465326

Option 4 ID : 264330465327

Status : Not Answered

Chosen Option : --

Q.17 In which budget was the policy of LERMS announced?

Ans 1. 1991-92

2. 1992-93

3. 1995-96

4. 1990-91

Question ID : 264330109418

Option 1 ID : 264330429950

Option 2 ID : 264330429951

Option 3 ID : 264330429952

Option 4 ID : 264330429949

Status : Not Answered

Chosen Option : --

Q.18 In the context of globalisation, what does PPP stand for?

- Ans
- 1. Purchase Power Parity
 - 2. Purchasing Par Parity
 - 3. Purchasing Power Parity
 - 4. Purchasing Par Parities

Question ID : 264330109581
Option 1 ID : 264330430602
Option 2 ID : 264330430603
Option 3 ID : 264330430601
Option 4 ID : 264330430604
Status : Answered
Chosen Option : 3

Q.19 _____ is the final interpreter of the Constitution of India.

- Ans
- 1. Attorney General
 - 2. Comptroller and Auditor General
 - 3. Supreme Court
 - 4. President of India

Question ID : 264330134562
Option 1 ID : 264330527204
Option 2 ID : 264330527203
Option 3 ID : 264330527205
Option 4 ID : 264330527206
Status : Answered
Chosen Option : 1

Q.20 Ram Sahay Pandey, a Padma Shri 2022 awardee, is associated with which of the following dance forms of the Bedia community of Madhya Pradesh?

- Ans
- 1. Karma
 - 2. Ravala
 - 3. Rai
 - 4. Badhai

Question ID : 26433071519
Option 1 ID : 264330280503
Option 2 ID : 264330280502
Option 3 ID : 264330280501
Option 4 ID : 264330280500
Status : Not Answered
Chosen Option : --

Q.21 Which of the following measures of credit control requires a well-developed money market?

- Ans
- 1. Open market operations
 - 2. Bank rate policy
 - 3. Variable reserve ratio
 - 4. Qualitative measures

Question ID : 264330112465
Option 1 ID : 264330441945
Option 2 ID : 264330441946
Option 3 ID : 264330441947
Option 4 ID : 264330441948
Status : Not Answered
Chosen Option : --

Q.22 Which of the following festivals is celebrated in honour of Hidimba Devi in Himachal Pradesh?

- Ans
- 1. Shorai Festival
 - 2. Maghi Festival
 - 3. Bisua Festival
 - 4. Doongri Festival

Question ID : 264330141782
Option 1 ID : 264330555450
Option 2 ID : 264330555449
Option 3 ID : 264330555448
Option 4 ID : 264330555447
Status : Answered
Chosen Option : 2

Q.23 Vijayadashami is also known as _____.

- Ans
- 1. Dussehra
 - 2. Holi
 - 3. Diwali
 - 4. Ganesh Chaturthi

Question ID : 264330109311
Option 1 ID : 264330429523
Option 2 ID : 264330429521
Option 3 ID : 264330429522
Option 4 ID : 264330429524
Status : Answered
Chosen Option : 1

Q.24 Who among the following social reformers established Satyashodhak Samaj?

- Ans
- 1. Jyotiba Phule
 - 2. Narayana Guru
 - 3. Ramaswami Naicker-Periyar
 - 4. Dr. Babasaheb Ambedkar

Question ID : 264330113595
Option 1 ID : 264330446465
Option 2 ID : 264330446467
Option 3 ID : 264330446468
Option 4 ID : 264330446466
Status : Answered
Chosen Option : 1

Q.25 Mein Kampf' has been written by which of the following politicians?

- Ans
- 1. Benito Mussolini
 - 2. Hirohito
 - 3. Adolf Hitler
 - 4. Clement Attlee

Question ID : 26433071507
Option 1 ID : 264330280452
Option 2 ID : 264330280454
Option 3 ID : 264330280453
Option 4 ID : 264330280455
Status : Not Answered
Chosen Option : --

Q.26 Pandit Ayodhya Prasad is associated with _____ .

Ans 1. pakhawaj

2. veena

3. flute

4. guitar

Question ID : 264330111936

Option 1 ID : 264330439830

Option 2 ID : 264330439829

Option 3 ID : 264330439831

Option 4 ID : 264330439832

Status : Not Answered

Chosen Option : --

Q.27 High Courts have the power to issue writs under which Article of the Constitution of India?

Ans 1. Article 222

2. Article 223

3. Article 226

4. Article 225

Question ID : 264330110578

Option 1 ID : 264330434592

Option 2 ID : 264330434590

Option 3 ID : 264330434591

Option 4 ID : 264330434589

Status : Answered

Chosen Option : 3

Q.28 Ashvaghosha, the author of Buddhacharita, was the philosopher in the court of which Kushana kings?

Ans 1. Kanishka I

2. Vasudeva I

3. Huvishka

4. Vima Kadphises

Question ID : 264330120419

Option 1 ID : 264330471927

Option 2 ID : 264330471930

Option 3 ID : 264330471929

Option 4 ID : 264330471928

Status : Answered

Chosen Option : 1

Q.29 Match List I (name of the periodic element) with List II (symbols of the periodic element) and select the correct code.

List I	List II
A. Magnesium	i. Mn
B. Boron	ii. B
C. Manganese	iii. Ba
D. Barium	iv. Mg

Code:	A	B	C	D
I	iv	iii	i	ii
II	i	ii	iv	iii
III	iv	i	ii	iii
IV	iv	ii	i	iii

- Ans**
- 1. III
 - 2. I
 - 3. II
 - 4. IV

Question ID : 264330173658
Option 1 ID : 264330681113
Option 2 ID : 264330681111
Option 3 ID : 264330681112
Option 4 ID : 264330681114
Status : Answered
Chosen Option : 4

Q.30 Name the Freedom fighter who formed a clan of non-violent revolutionaries called Khudai Khidmatgars in 1929.

- Ans**
- 1. KM Ashraf
 - 2. Khan Abdul Ghaffar Khan
 - 3. Abbas Tayabji
 - 4. Mohammed Yasin Khan

Question ID : 264330171708
Option 1 ID : 264330673437
Option 2 ID : 264330673438
Option 3 ID : 264330673435
Option 4 ID : 264330673436
Status : Answered
Chosen Option : 2

Q.31 The National Sports Festival for Women was started in ____.

- Ans**
- 1. 1974
 - 2. 1975
 - 3. 1976
 - 4. 1970

Question ID : 264330110368
Option 1 ID : 264330433750
Option 2 ID : 264330433751
Option 3 ID : 264330433752
Option 4 ID : 264330433749
Status : Not Answered
Chosen Option : --

Q.32 Which of the following states topped the medal tally in the Khelo India Youth Games 2023?

- Ans 1. Maharashtra
 2. Haryana
 3. Uttar Pradesh
 4. Punjab

Question ID : 264330176920
Option 1 ID : 264330693875
Option 2 ID : 264330693876
Option 3 ID : 264330693878
Option 4 ID : 264330693877
Status : Answered
Chosen Option : 1

Q.33 National Food Security Mission was launched in India in the year 2007-08 to increase the production of rice, wheat and _____.

- Ans 1. saffron
 2. millet
 3. pulses
 4. fruits

Question ID : 264330183060
Option 1 ID : 264330717975
Option 2 ID : 264330717974
Option 3 ID : 264330717972
Option 4 ID : 264330717973
Status : Answered
Chosen Option : 2

Q.34 The autobiography 'Long Walk to Freedom' is written by:

- Ans 1. Nelson Mandela
 2. BR Ambedkar
 3. Rabindranath Tagore
 4. MK Gandhi

Question ID : 26433072941
Option 1 ID : 264330285958
Option 2 ID : 264330285956
Option 3 ID : 264330285959
Option 4 ID : 264330285957
Status : Answered
Chosen Option : 1

Q.35 Which of the following options had figured in the royal emblem of the Chola dynasty?

- Ans 1. Tiger
 2. Elephant
 3. Fish
 4. Horse

Question ID : 264330118981
Option 1 ID : 264330466580
Option 2 ID : 264330466581
Option 3 ID : 264330466579
Option 4 ID : 264330466582
Status : Answered
Chosen Option : 3

Q.36 Which Indian state has got the highest literacy rate as per National Survey of India 2022?

- Ans
- 1. Goa
 - 2. Maharashtra
 - 3. Kerala
 - 4. Karnataka

Question ID : 264330177909
Option 1 ID : 264330697724
Option 2 ID : 264330697725
Option 3 ID : 264330697723
Option 4 ID : 264330697726
Status : Answered
Chosen Option : 3

Q.37 According to Sangam texts, the term uzhavar means:

- Ans
- 1. slaves
 - 2. large landowners
 - 3. teachers
 - 4. ordinary ploughmen

Question ID : 264330119473
Option 1 ID : 264330468177
Option 2 ID : 264330468178
Option 3 ID : 264330468175
Option 4 ID : 264330468176
Status : Not Answered
Chosen Option : --

Q.38 The famous festival known as 'Paro Tschechu' is associated with which country?

- Ans
- 1. Japan
 - 2. Burma
 - 3. Bhutan
 - 4. Thailand

Question ID : 264330182980
Option 1 ID : 264330717652
Option 2 ID : 264330717653
Option 3 ID : 264330717654
Option 4 ID : 264330717655
Status : Not Answered
Chosen Option : --

Q.39 Which Article of the Constitution of India empowers a High Court to issue writs?

- Ans
- 1. Article 230
 - 2. Article 220
 - 3. Article 223
 - 4. Article 226

Question ID : 264330177763
Option 1 ID : 264330697162
Option 2 ID : 264330697159
Option 3 ID : 264330697160
Option 4 ID : 264330697161
Status : Answered
Chosen Option : 4

Q.40 Under which Constitutional Amendment Act, was the term "Secular" added in the Preamble?

- Ans
- 1. 43rd Constitutional Amendment Act
 - 2. 44th Constitutional Amendment Act
 - 3. 41st Constitutional Amendment Act
 - 4. 42nd Constitutional Amendment Act

Question ID : 264330114481
Option 1 ID : 264330450011
Option 2 ID : 264330450012
Option 3 ID : 264330450009
Option 4 ID : 264330450010
Status : Answered
Chosen Option : 4

Q.41 Khandesh was incorporated into the Mughal empire in which of the following years?

- Ans
- 1. 1601
 - 2. 1603
 - 3. 1598
 - 4. 1600

Question ID : 264330171693
Option 1 ID : 264330673377
Option 2 ID : 264330673378
Option 3 ID : 264330673375
Option 4 ID : 264330673376
Status : Answered
Chosen Option : 2

Q.42 Which place in the north-eastern part of the northern Indian state of Himachal Pradesh is popularly known as the Cold Desert Mountains?

- Ans
- 1. Sangti Valley
 - 2. Parvati Valley
 - 3. Aalo Valley
 - 4. Spiti Valley

Question ID : 264330131014
Option 1 ID : 264330513168
Option 2 ID : 264330513169
Option 3 ID : 264330513167
Option 4 ID : 264330513170
Status : Not Answered
Chosen Option : --

Q.43 Select the personality who received the Sangeet Natak Akademi 2021 award for his/her contribution in Mohiniyattam.

- Ans
- 1. Thokchom Ibemubi Devi
 - 2. Bhuvan Kumar
 - 3. Neena Prasad
 - 4. Bijay Kumar Jena

Question ID : 264330130528
Option 1 ID : 264330511225
Option 2 ID : 264330511223
Option 3 ID : 264330511224
Option 4 ID : 264330511226
Status : Answered
Chosen Option : 3

Q.44 From which of the following countries did India adopt the 'amendment procedure in the constitution'?

- Ans 1. South Africa
 2. Ireland
 3. The US
 4. France

Question ID : 264330133044
Option 1 ID : 264330521230
Option 2 ID : 264330521227
Option 3 ID : 264330521228
Option 4 ID : 264330521229
Status : Answered
Chosen Option : 1

Q.45 The Dronacharya award is given to _____.

- Ans 1. best coach
 2. best player
 3. best teacher
 4. best soldier

Question ID : 264330110389
Option 1 ID : 264330433834
Option 2 ID : 264330433833
Option 3 ID : 264330433835
Option 4 ID : 264330433836
Status : Answered
Chosen Option : 1

Q.46 Pandit Hariprasad Chaurasia is a world-renowned exponent of the _____.

- Ans 1. Sarod
 2. Sitar
 3. Bansuri
 4. tabla

Question ID : 264330116420
Option 1 ID : 264330457767
Option 2 ID : 264330457768
Option 3 ID : 264330457765
Option 4 ID : 264330457766
Status : Answered
Chosen Option : 4

Q.47 In the Lok Sabha, _____ seats are reserved for the members from Scheduled Castes.

- Ans 1. 80
 2. 82
 3. 73
 4. 84

Question ID : 264330139438
Option 1 ID : 264330546185
Option 2 ID : 264330546184
Option 3 ID : 264330546183
Option 4 ID : 264330546186
Status : Not Answered
Chosen Option : --

Q.48 Below are some statements about the Ozone layer.

Statement 1. It is found in the stratosphere.

Statement 2. Chlorofluorocarbons (CFCs) are responsible for Ozone hole.

Statement 3. Ozone layer is found around 15–30 km above the earth's surface.

Statement 4. Ozone layer is expected not to recover anymore now.

Which of these statements are correct?

- Ans**
- 1. Only statements 2, 3 and 4
 - 2. Only statements 3 and 4
 - 3. Only statements 1, 2 and 3
 - 4. Only statements 1 and 2

Question ID : 264330131802

Option 1 ID : 264330516310

Option 2 ID : 264330516309

Option 3 ID : 264330516307

Option 4 ID : 264330516308

Status : Answered

Chosen Option : 3

Q.49 The Sun Temple of Konark is located on the shore of the _____.

- Ans**
- 1. Bay of Bengal
 - 2. Indian Ocean
 - 3. Red Sea
 - 4. Arabian Sea

Question ID : 264330109649

Option 1 ID : 264330430874

Option 2 ID : 264330430873

Option 3 ID : 264330430876

Option 4 ID : 264330430875

Status : Answered

Chosen Option : 1

Q.50 Hojagiri is a famous dance form of which of these states?

- Ans**
- 1. Punjab
 - 2. Jharkhand
 - 3. Assam
 - 4. Tripura

Question ID : 264330109286

Option 1 ID : 264330429421

Option 2 ID : 264330429424

Option 3 ID : 264330429422

Option 4 ID : 264330429423

Status : Not Answered

Chosen Option : --

Section : Reasoning

Q.1 Two statements are given followed by two conclusions numbered I and II. Assuming the statements to be true, even if they seem to be at variance from commonly known facts, decide which of the conclusions logically follow(s) from the statements.

Statements:

All Shirts are Cottons.

Some Shirts are Nets.

Conclusions:

I. All Nets are Shirts.

II. Some Nets are Cottons.

- Ans
- 1. Both conclusions I and II follow.
 - 2. Only conclusion II follows.
 - 3. Neither conclusion I nor II follows.
 - 4. Only conclusion I follows.

Question ID : 26433076595

Option 1 ID : 264330300446

Option 2 ID : 264330300445

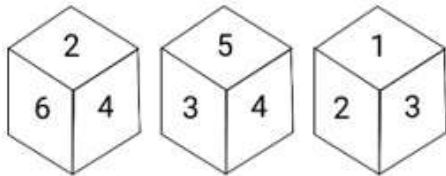
Option 3 ID : 264330300447

Option 4 ID : 264330300444

Status : Answered

Chosen Option : 2

Q.2 Three different positions of the same dice are shown. Find the number on the face opposite to the face showing '3'.



- Ans
- 1. 2
 - 2. 5
 - 3. 1
 - 4. 6

Question ID : 264330112035

Option 1 ID : 264330440225

Option 2 ID : 264330440228

Option 3 ID : 264330440226

Option 4 ID : 264330440227

Status : Answered

Chosen Option : 4

Q.3 Which of the following letter clusters will replace the question mark (?) in the given series to make it logically complete?
JGI, HJG, FME, DPC, ?

- Ans
- 1. BSA
 - 2. BSB
 - 3. BRB
 - 4. ASA

Question ID : 264330102226

Option 1 ID : 264330401371

Option 2 ID : 264330401370

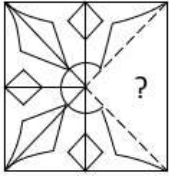
Option 3 ID : 264330401369

Option 4 ID : 264330401372

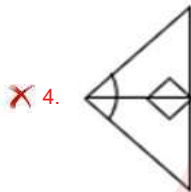
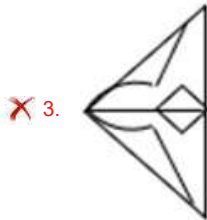
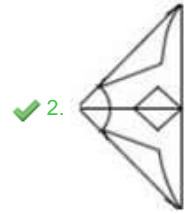
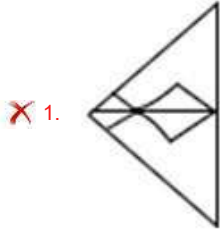
Status : Answered

Chosen Option : 1

Q.4 Select the option figure that will replace the question mark (?) in the figure given below to complete the pattern.



Ans



Question ID : 26433080836

Option 1 ID : 264330317280

Option 2 ID : 264330317279

Option 3 ID : 264330317277

Option 4 ID : 264330317278

Status : Answered

Chosen Option : 2

Q.5 Select the number from among the given options that can replace the question mark (?) in the following series.

1, 2, 5, 26, 677, ?

- Ans
- 1. 3255
 - 2. 45245
 - 3. 24563
 - 4. 458330

Question ID : 264330109759

Option 1 ID : 264330431316

Option 2 ID : 264330431313

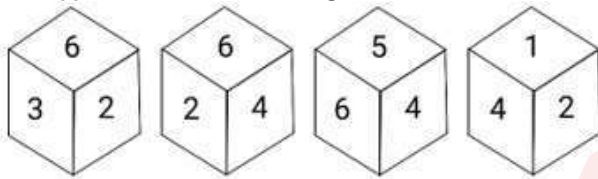
Option 3 ID : 264330431315

Option 4 ID : 264330431314

Status : Answered

Chosen Option : 4

Q.6 Four different positions of the same dice are shown below. Which number is on the face opposite to the face showing '6'?



- Ans
- 1. 1
 - 2. 3
 - 3. 2
 - 4. 4

Question ID : 264330112039

Option 1 ID : 264330440241

Option 2 ID : 264330440243

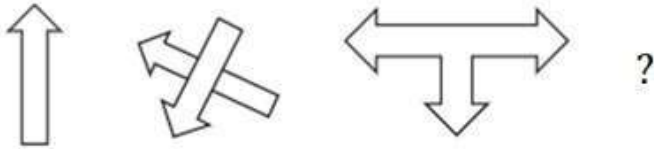
Option 3 ID : 264330440242

Option 4 ID : 264330440244


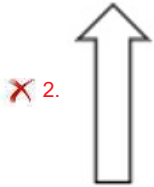
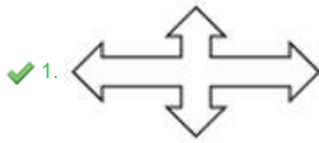
Status : Answered

Chosen Option : 1

Q.7 Select the figure that will replace the question mark (?) in the following figure series.



Ans



Question ID : 264330112033

Option 1 ID : 264330440218

Option 2 ID : 264330440217

Option 3 ID : 264330440220

Option 4 ID : 264330440219

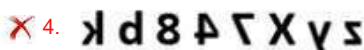
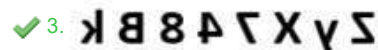
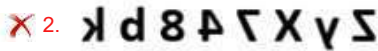
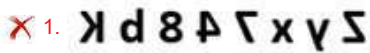
Status : Answered

Chosen Option : 1

Q.8 Select the correct mirror image of the given figure when the mirror is placed at MN as shown below.



Ans



Question ID : 264330117300

Option 1 ID : 264330461257

Option 2 ID : 264330461260

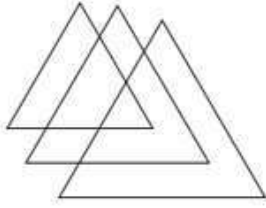
Option 3 ID : 264330461259

Option 4 ID : 264330461258

Status : Answered

Chosen Option : 3

Q.9 How many triangles are there in the given figure?



Ans 1.6

2.5

3.7

4.8

Question ID : 26433094985

Option 1 ID : 264330372762

Option 2 ID : 264330372761

Option 3 ID : 264330372763

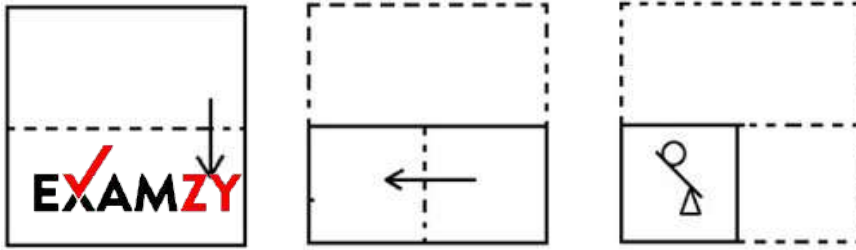
Option 4 ID : 264330372764

Status : Answered

Chosen Option : 1

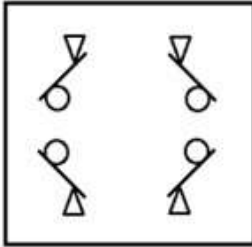


Q.10 The sequence of folding a piece of paper and the manner in which the folded paper has been cut is shown below. Choose a figure which would most closely resemble the unfolded form of the paper.

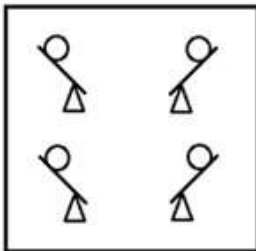


Ans

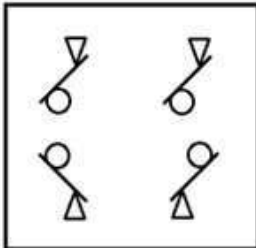
✓ 1.



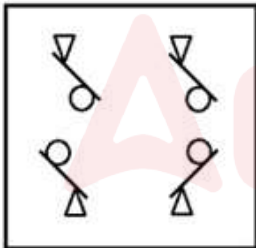
✗ 2.



✗ 3.



✗ 4.



Question ID : 264330112315

Option 1 ID : 264330441348

Option 2 ID : 264330441345

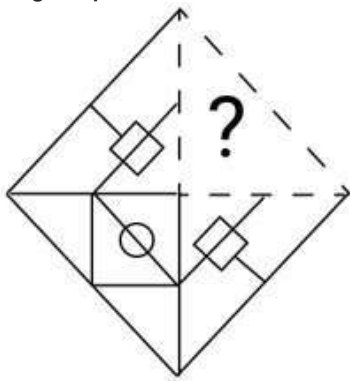
Option 3 ID : 264330441347

Option 4 ID : 264330441346

Status : Answered

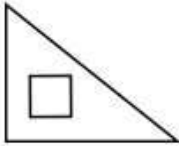
Chosen Option : 1

Q.11 Select the figure from the options that can replace the question mark (?) and complete the given pattern.

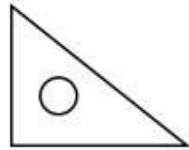


Ans

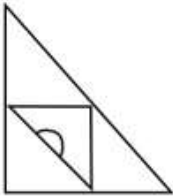
✗ 1.



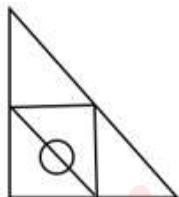
✗ 2.



✗ 3.



✓ 4.



Question ID : 264330106463

Option 1 ID : 264330418154

Option 2 ID : 264330418153

Option 3 ID : 264330418156

Option 4 ID : 264330418155

Status : Answered

Chosen Option : 4

Q.12 Six students are sitting around a circular table facing the centre. Red is sitting fourth to the right of White. Blue is sitting second to the right of Gray. Black is sitting third to the right of Pink. White is the immediate neighbour of Gray and Black.. Who is the immediate neighbour of Red and Pink?

Ans ✓ 1. Blue

✗ 2. Black

✗ 3. Gray

✗ 4. White

Question ID : 26433081654

Option 1 ID : 264330320449

Option 2 ID : 264330320452

Option 3 ID : 264330320450

Option 4 ID : 264330320451

Status : Answered

Chosen Option : 1

Q.13

Which figure from the given options would replace the question mark (?) if the following figure series were to be continued?

B	♥	∩	○	B	♥	○	♥	B	∩	○	♥	
○	V	8	V	8	∩	∩	V	8	V	8	B	?
∩	=	X	∩	X	=	X	=	∩	X	∩	=	

Ans

✗ 1.

○	∩	♥
X	V	8
∩	=	B

✗ 2.

V	∩	○
8	B	♥
X	=	∩

✗ 3.

∩	♥	○
8	B	=
V	X	∩

✓ 4.

∩	♥	○
X	V	8
∩	=	B

Question ID : 26433044934

Option 1 ID : 264330176171

Option 2 ID : 264330176173

Option 3 ID : 264330176174

Option 4 ID : 264330176172

Status : Answered

Chosen Option : 4

Q.14 Which figure should replace the question mark (?) if the series were to be continued?

A	U	9	9	A	U	S	9	A	A	S	9	
	S		=			□			U			?
	=		S			U			□			

Ans

1.

9	□	A
S		
U		
2.

□	A	S
4		
9		
3.

S	9	□
4		
A		
4.

□	A	S
U		
9		

Question ID : 264330130796

Option 1 ID : 264330512298

Option 2 ID : 264330512296

Option 3 ID : 264330512297

Option 4 ID : 264330512295

Status : Answered

Chosen Option : 4

Q.15 Select the word-pair that best represents a similar relationship to the one expressed in the pair of words given below.
(The words must be considered as meaningful English words and must not be related to each other based on the number of letters/number of consonants/vowels in the word.)

Exit : Leave

- Ans
1. Fate : Fete
2. Select : Choose
3. Start : End
4. Moat : Mote

Question ID : 26433053231

Option 1 ID : 264330208229

Option 2 ID : 264330208228

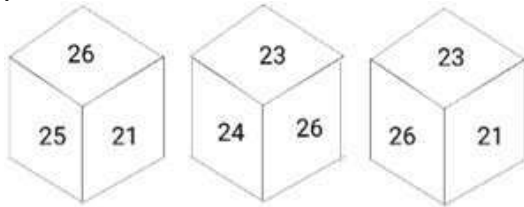
Option 3 ID : 264330208226

Option 4 ID : 264330208227

Status : Answered

Chosen Option : 2

Q.16 Six numbers, 21, 22, 23, 24, 25 and 26 are written on different faces of a dice. Three positions of this dice are shown here. Find the number on the face opposite 21.



Ans 1. 24

2. 22

3. 23

4. 25

Question ID : 264330106413

Option 1 ID : 264330417955

Option 2 ID : 264330417953

Option 3 ID : 264330417954

Option 4 ID : 264330417956

Status : Answered

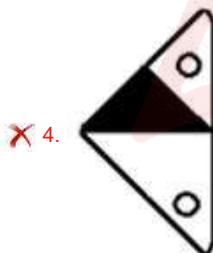
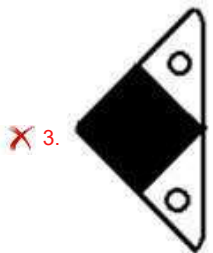
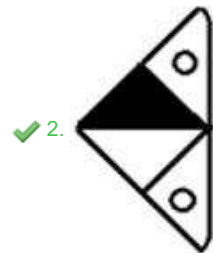
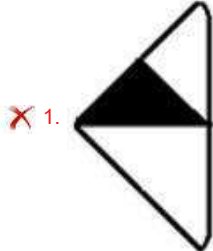
Chosen Option : 1



Q.17 Select the option figure that will replace the question mark (?) in the figure given below to complete the pattern.



Ans



Question ID : 26433089462

Option 1 ID : 264330351351

Option 2 ID : 264330351350

Option 3 ID : 264330351352

Option 4 ID : 264330351349

Status : Answered

Chosen Option : 2

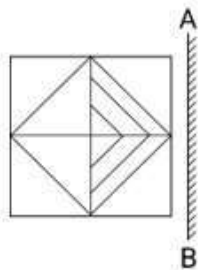
Q.18 Select the set in which the numbers are related in the same way as are the numbers of the following sets.

(NOTE: Operations should be performed on the whole numbers, without breaking down the numbers into its constituent digits. E.g. 13 – Operations on 13 such as adding/deleting/multiplying etc. to 13 can be performed. Breaking down 13 into 1 and 3 and then performing mathematical operations on 1 and 3 is not allowed)
 (4, 42, 5), (3, 45, 7)

- Ans
- 1. (6, 49, 3)
 - 2. (6, 32, 2)
 - 3. (7, 43, 4)
 - 4. (7, 42, 5)

Question ID : 26433097192
 Option 1 ID : 264330381467
 Option 2 ID : 264330381465
 Option 3 ID : 264330381466
 Option 4 ID : 264330381468
 Status : Answered
 Chosen Option : 4

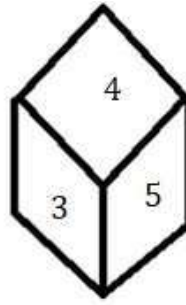
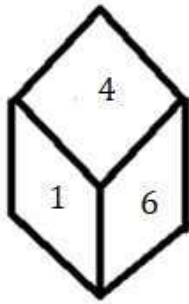
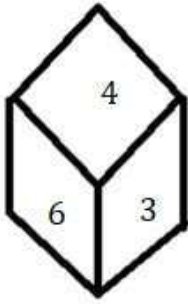
Q.19 Select the correct mirror image of the given figure when the mirror is placed at 'AB' as shown.



- Ans
- 1.
 - 2.
 - 3.
 - 4.

Question ID : 264330114260
 Option 1 ID : 264330449126
 Option 2 ID : 264330449125
 Option 3 ID : 264330449128
 Option 4 ID : 264330449127
 Status : Answered
 Chosen Option : 2

Q.20 Three different positions of the same dice are shown. Find the number on the face opposite the face having '2'.



- Ans
- 1. 1
 - 2. 4
 - 3. 3
 - 4. 6

Question ID : 264330113651
Option 1 ID : 264330446689
Option 2 ID : 264330446692
Option 3 ID : 264330446691
Option 4 ID : 264330446690
Status : Answered
Chosen Option : 2

Q.21 Select the option that is related to the third term in the same way as the second term is related to the first term and the sixth term is related to the fifth term.
400 : 200 :: 248 : ? :: 256 : 128

- Ans
- 1. 200
 - 2. 124
 - 3. 148
 - 4. 114

Question ID : 264330101043
Option 1 ID : 264330396720
Option 2 ID : 264330396717
Option 3 ID : 264330396719
Option 4 ID : 264330396718
Status : Answered
Chosen Option : 2

Q.22 Which two signs should be interchanged to make the following equation correct?

$$29 - 23 + 42 \times 21 \div 2 = 10$$

- Ans
- 1. - and +
 - 2. + and +
 - 3. - and ×
 - 4. ÷ and ×

Question ID : 264330101076
Option 1 ID : 264330396849
Option 2 ID : 264330396852
Option 3 ID : 264330396851
Option 4 ID : 264330396850
Status : Answered
Chosen Option : 4

Q.23 In a certain code language, 'BAE' is written as '512' and 'WIN' is written as '14923'.
How will 'HER' be written in that language?

- Ans
- 1. 1826
 - 2. 1844
 - 3. 1838
 - 4. 1858

Question ID : 26433089414
Option 1 ID : 264330351157
Option 2 ID : 264330351159
Option 3 ID : 264330351158
Option 4 ID : 264330351160
Status : Answered
Chosen Option : 4

Q.24 Select the correct combination of mathematical signs that can sequentially replace the
* signs and balance the given equation.

$$54 * 16 * 3 * 6 * 2 * 9$$

- Ans
- 1. +, x, -, +, =
 - 2. +, -, x, +, =
 - 3. -, x, +, +, =
 - 4. +, -, x, +, =

Question ID : 26433079086
Option 1 ID : 264330310348
Option 2 ID : 264330310349
Option 3 ID : 264330310350
Option 4 ID : 264330310351
Status : Answered
Chosen Option : 3

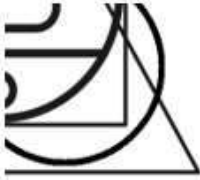
Adda247

Q.25 Which of the following option figures will complete the pattern in the figure given below?

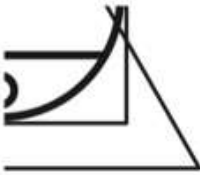


Ans

✗ 1.



✗ 2.



✗ 3.



✓ 4.



Question ID : 26433089629

Option 1 ID : 264330352020

Option 2 ID : 264330352018

Option 3 ID : 264330352019

Option 4 ID : 264330352017

Status : Answered

Chosen Option : 4

Section : Numerical Ability

Q.1 If 4 men or 8 women can do a work in 12 days, then in how many days can 9 men and 6 women do the same work?

Ans ✗ 1. 5

✓ 2. 4

✗ 3. 3

✗ 4. 6

Question ID : 264330104328

Option 1 ID : 264330409615

Option 2 ID : 264330409614

Option 3 ID : 264330409613

Option 4 ID : 264330409616

Status : Answered

Chosen Option : 2

Q.2 The selling price of 32 items is equal to the cost price of 45 items. What is the percentage of profit made on the sale of each item?

- Ans
- 1. 40.75%
 - 2. 40.5%
 - 3. 40.725%
 - 4. 40.625%

Question ID : 264330183824
Option 1 ID : 264330720972
Option 2 ID : 264330720973
Option 3 ID : 264330720974
Option 4 ID : 264330720975
Status : Answered
Chosen Option : 4

Q.3 A person divides his property so that his wife's share to his daughter's and the daughter's share to his son's, are both in the ratio 1 : 4. If the wife gets ₹5,000 less than the son, the value (in ₹) of the whole property is:

- Ans
- 1. 7,000
 - 2. 5,000
 - 3. 6,000
 - 4. 8,000

Question ID : 264330129427
Option 1 ID : 264330507076
Option 2 ID : 264330507074
Option 3 ID : 264330507075
Option 4 ID : 264330507077
Status : Answered
Chosen Option : 1

Q.4 The LCM of two numbers is 12 times their HCF. One of the numbers is 8 and the sum of the HCF and LCM is 52. What is the other number?

- Ans
- 1. 22
 - 2. 24
 - 3. 26
 - 4. 28

Question ID : 264330104149
Option 1 ID : 264330408897
Option 2 ID : 264330408898
Option 3 ID : 264330408899
Option 4 ID : 264330408900
Status : Answered
Chosen Option : 2

Q.5 In an equilateral triangle, each side is 'a' units. The altitude of this triangle is:

Ans

✓ 1. $\frac{a\sqrt{3}}{2}$

✗ 2. $\frac{4a}{3}$

✗ 3. $\frac{\sqrt{3} a}{\sqrt{2}}$

✗ 4. $\frac{3a^2}{4}$

Question ID : 264330104367

Option 1 ID : 264330409769

Option 2 ID : 264330409770

Option 3 ID : 264330409771

Option 4 ID : 264330409772

Status : Answered

Chosen Option : 1

Q.6 The inradius of a triangle is 7 cm and its area is 343 cm². The perimeter of the triangle is

Ans

✓ 1. 98 cm

✗ 2. 68 cm

✗ 3. 88 cm

✗ 4. 49 cm

Question ID : 264330119359

Option 1 ID : 264330467723

Option 2 ID : 264330467725

Option 3 ID : 264330467724

Option 4 ID : 264330467726

Status : Not Answered

Chosen Option : --

Q.7 A sum of ₹2,52,500 at the rate of 4.5% per annum for a period of 2.5 years will amount to how much (in ₹) if the money is invested at simple interest?

Ans

✗ 1. 2,75,906.50

✗ 2. 2,78,906.25

✗ 3. 2,82,906.25

✓ 4. 2,80,906.25

Question ID : 264330119932

Option 1 ID : 264330470005

Option 2 ID : 264330470004

Option 3 ID : 264330470003

Option 4 ID : 264330470006

Status : Answered

Chosen Option : 4

Q.8 In how many seconds will a 210 m long train, travelling at a speed of 97 km/h, come from behind and completely cross a 240 m long train travelling at 79 km/h in the same direction as that of the first train?

- Ans
- 1. 96
 - 2. 100
 - 3. 90
 - 4. 84

Question ID : 264330122848
Option 1 ID : 264330481461
Option 2 ID : 264330481462
Option 3 ID : 264330481460
Option 4 ID : 264330481459
Status : Answered
Chosen Option : 3

Q.9 The marked price of a book is ₹700 but the retailer gets a discount of 20%. If the retailer sells the book at marked price, then the profit percentage is:

- Ans
- 1. 20%
 - 2. 30%
 - 3. 25%
 - 4. 22%

Question ID : 264330130931
Option 1 ID : 264330512835
Option 2 ID : 264330512837
Option 3 ID : 264330512836
Option 4 ID : 264330512838
Status : Answered
Chosen Option : 3

Q.10 A person loses 18% of his money and after spending 87% of the remainder, he is left with ₹122. How much did he originally have? (Approximate value)

- Ans
- 1. ₹1,200
 - 2. ₹1,143.8
 - 3. ₹1,300
 - 4. ₹1,144.5

Question ID : 264330131828
Option 1 ID : 264330516411
Option 2 ID : 264330516414
Option 3 ID : 264330516413
Option 4 ID : 264330516412
Status : Answered
Chosen Option : 4

Q.11 The compound interest on a sum of ₹8,000 becomes ₹1,261 in 18 months. Find the rate of interest if interest is compounded half-yearly.

- Ans
- 1. 12%
 - 2. 20%
 - 3. 10%
 - 4. 8%

Question ID : 264330109256
Option 1 ID : 264330429302
Option 2 ID : 264330429304
Option 3 ID : 264330429301
Option 4 ID : 264330429303
Status : Answered
Chosen Option : 3

Q.12 Two wires, 18 m and 24 m long, are to be cut into pieces of equal length. Find the maximum length of each piece (in m).

- Ans
- 1. 12
 - 2. 18
 - 3. 8
 - 4. 6

Question ID : 264330118033
Option 1 ID : 264330463947
Option 2 ID : 264330463950
Option 3 ID : 264330463948
Option 4 ID : 264330463949
Status : Answered
Chosen Option : 4

Q.13 The average of 5 consecutive odd numbers is 63. Which of the following is the largest number among them?

- Ans
- 1. 65
 - 2. 69
 - 3. 67
 - 4. 71

Question ID : 264330129988
Option 1 ID : 264330509183
Option 2 ID : 264330509185
Option 3 ID : 264330509184
Option 4 ID : 264330509186
Status : Answered
Chosen Option : 3

Q.14 Find the greatest number that divides 90, 180 and 240 exactly.

- Ans
- 1. 20
 - 2. 60
 - 3. 15
 - 4. 30

Question ID : 264330109227
Option 1 ID : 264330429186
Option 2 ID : 264330429188
Option 3 ID : 264330429187
Option 4 ID : 264330429185
Status : Answered
Chosen Option : 4

Q.15 The base of a right-angle triangle is increased by 60%. How much its height should be decreased to retain the same area?

- Ans
- 1. 30%
 - 2. 45.2%
 - 3. 60%
 - 4. 37.5%

Question ID : 264330142526
Option 1 ID : 264330558383
Option 2 ID : 264330558385
Option 3 ID : 264330558386
Option 4 ID : 264330558384
Status : Answered
Chosen Option : 4

Section : Computer Proficiency

Q.1 In MS Excel 365, Which of the following is NOT a type of chart in MS Excel?

- Ans
- 1. Line chart
 - 2. Bar chart
 - 3. Pie chart
 - 4. Space chart

Question ID : 264330178560
Option 1 ID : 264330700267
Option 2 ID : 264330700268
Option 3 ID : 264330700269
Option 4 ID : 264330700270
Status : Answered
Chosen Option : 4

Q.2 Which of the following is used in MS Word 365 to change the case in a reverse way?

- Ans
- 1. Reverse case
 - 2. Change case
 - 3. Toggle case
 - 4. Alter case

Question ID : 264330176709
Option 1 ID : 264330693051
Option 2 ID : 264330693052
Option 3 ID : 264330693054
Option 4 ID : 264330693053
Status : Answered
Chosen Option : 1

Q.3 In Microsoft Excel 365, which option should be selected if you want to save a workbook as a macro-enabled workbook with a different file name and location?

- Ans**
- 1. Save As
 - 2. Save a Copy
 - 3. Save Excel
 - 4. Save Workspace

Question ID : 264330178084
Option 1 ID : 264330698399
Option 2 ID : 264330698400
Option 3 ID : 264330698401
Option 4 ID : 264330698402
Status : Answered
Chosen Option : 1

Q.4 What icon is used for attaching a file or document to an email message?

- Ans**
- 1. Pen icon
 - 2. Smiley icon
 - 3. Paper clip icon
 - 4. Trash can icon

Question ID : 264330182093
Option 1 ID : 264330714214
Option 2 ID : 264330714211
Option 3 ID : 264330714213
Option 4 ID : 264330714212
Status : Answered
Chosen Option : 3

Q.5 What is the main purpose of a search engine?

- Ans**
- 1. Editing news articles
 - 2. Playing online games
 - 3. Sending emails
 - 4. Finding information on the internet

Question ID : 264330180666
Option 1 ID : 264330708633
Option 2 ID : 264330708631
Option 3 ID : 264330708632
Option 4 ID : 264330708634
Status : Answered
Chosen Option : 4

Q.6 Which icon is commonly used to undo the last action performed in MS Word 365?

- Ans**
- 1. A pair of scissors
 - 2. A curved arrow pointing to the left
 - 3. A trash can
 - 4. A pencil

Question ID : 264330180862
Option 1 ID : 264330709411
Option 2 ID : 264330709412
Option 3 ID : 264330709414
Option 4 ID : 264330709413
Status : Answered
Chosen Option : 2

Q.7 In MS Excel 365, which of the following keyboard shortcut keys is used to insert a new row in MS-Excel 365?

- Ans**
- 1. Ctrl + Alt + n
 - 2. Ctrl + Alt + + (plus key)
 - 3. Ctrl + shift + n
 - 4. Ctrl + shift + + (plus key)

Question ID : 264330179439
Option 1 ID : 264330703762
Option 2 ID : 264330703761
Option 3 ID : 264330703759
Option 4 ID : 264330703760
Status : Answered
Chosen Option : 3

Q.8 How do we move the cursor to the beginning of a Microsoft Word 365 document?

- Ans**
- 1. By pressing 'Ctrl + End'
 - 2. By pressing 'Ctrl + Home'
 - 3. By pressing 'Ctrl + PgUp'
 - 4. By pressing 'Ctrl + PgDn'

Question ID : 264330182073
Option 1 ID : 264330714132
Option 2 ID : 264330714131
Option 3 ID : 264330714133
Option 4 ID : 264330714134
Status : Answered
Chosen Option : 2

Q.9 Which of the following groups within the Insert tab will help us create a table in Microsoft Word 365?

- Ans**
- 1. Tables
 - 2. Illustrations
 - 3. Pages
 - 4. Links

Question ID : 264330182066
Option 1 ID : 264330714104
Option 2 ID : 264330714105
Option 3 ID : 264330714103
Option 4 ID : 264330714106
Status : Answered
Chosen Option : 1

Q.10 What are the icons below the menu bar in a word processing application called?

- Ans**
- 1. Toolbar icons
 - 2. Shortcut icons
 - 3. Format icons
 - 4. Tool icons

Question ID : 264330173599
Option 1 ID : 264330680878
Option 2 ID : 264330680877
Option 3 ID : 264330680876
Option 4 ID : 264330680875
Status : Answered
Chosen Option : 3

Constable Executive Male and Female in Delhi Police Examination 2023

Roll Number	
Candidate Name	
Venue Name	IHNC Mahaveer Bazar
Exam Date	15/11/2023
Exam Time	9:00 AM - 10:30 AM
Subject	Constable Executive Male and Female in Delhi Police Examination 2023

Section : **General Knowledge**

Q.1 How many medals did India win in the International Shooting Sport Federation (ISSF) World Cup-2022, which was held in Cairo, Egypt?

- Ans
- 1. 5
 - 2. 4
 - 3. 7
 - 4. 6

Question ID : 264330113744
Option 1 ID : 264330447063
Option 2 ID : 264330447064
Option 3 ID : 264330447061
Option 4 ID : 264330447062
Status : **Not Answered**
Chosen Option : --

Q.2 Narthaki Nataraj, awarded with Padma Shri in 2019 is an Indian _____ dancer.

- Ans
- 1. Odissi
 - 2. Bharatanatyam
 - 3. Kathakali
 - 4. Kathak

Question ID : 26433094878
Option 1 ID : 264330372335
Option 2 ID : 264330372334
Option 3 ID : 264330372336
Option 4 ID : 264330372333
Status : **Not Answered**
Chosen Option : --

Q.3 The innermost sanctum of a Hindu temple where the idol of the main deity is placed is called:

- Ans
- 1. Garbhagriha
 - 2. Mandapa
 - 3. Pradakshina path
 - 4. Shikhara

Question ID : 26433072939
Option 1 ID : 264330285948
Option 2 ID : 264330285950
Option 3 ID : 264330285949
Option 4 ID : 264330285951
Status : **Answered**
Chosen Option : 1

Q.4 In which state of India from the following is the old bamboo drip irrigation technology still used in the agriculture?

- Ans
- 1. Maharashtra
 - 2. Chhattisgarh
 - 3. Meghalaya
 - 4. Telangana

Question ID : 264330182946
Option 1 ID : 264330717519
Option 2 ID : 264330717516
Option 3 ID : 264330717518
Option 4 ID : 264330717517
Status : Not Answered
Chosen Option : --

Q.5 Which Constitutional Amendment Act has replaced the collegium system of appointing judges to the Supreme Court and High Courts?

- Ans
- 1. 99th Amendment Act
 - 2. 65th Amendment Act
 - 3. 82nd Amendment Act
 - 4. 52nd Amendment Act

Question ID : 264330166153
Option 1 ID : 264330651682
Option 2 ID : 264330651680
Option 3 ID : 264330651681
Option 4 ID : 264330651679
Status : Answered
Chosen Option : 1

Q.6 Who led the English Forces in the Battle of Buxar?

- Ans
- 1. Hector Munro
 - 2. Sir Hugh Wheeler
 - 3. Henry Lawrence
 - 4. John Nicholson

Question ID : 264330171699
Option 1 ID : 264330673399
Option 2 ID : 264330673402
Option 3 ID : 264330673401
Option 4 ID : 264330673400
Status : Answered
Chosen Option : 1

Q.7 Under which Article of the Indian Constitution are Fundamental Duties mentioned?

- Ans
- 1. Article 50B
 - 2. Article 44C
 - 3. Article 51A
 - 4. Article 55D

Question ID : 264330114137
Option 1 ID : 264330448634
Option 2 ID : 264330448633
Option 3 ID : 264330448635
Option 4 ID : 264330448636
Status : Answered
Chosen Option : 3

Q.8 Which of the following Indian players has written the autobiography titled 'Ace Against Odds'?

- Ans
- 1. Saina Nehwal
 - 2. Maria Sharapova
 - 3. Monica Seles
 - 4. Sania Mirza

Question ID : 26433055355
Option 1 ID : 264330216404
Option 2 ID : 264330216405
Option 3 ID : 264330216407
Option 4 ID : 264330216406
Status : Answered
Chosen Option : 4

Q.9 The Ahaia Winter Festival is primarily organised by the North-Eastern state of _____ to promote tourism.

- Ans
- 1. Meghalaya
 - 2. Tripura
 - 3. Arunachal Pradesh
 - 4. Sikkim

Question ID : 264330182996
Option 1 ID : 264330717716
Option 2 ID : 264330717718
Option 3 ID : 264330717717
Option 4 ID : 264330717719
Status : Not Answered
Chosen Option : --

Q.10 Which of the following countries hosts the first para Asiad?

- Ans
- 1. South Korea
 - 2. China
 - 3. Japan
 - 4. India

Question ID : 264330132536
Option 1 ID : 264330519242
Option 2 ID : 264330519240
Option 3 ID : 264330519241
Option 4 ID : 264330519239
Status : Answered
Chosen Option : 2

Q.11 Who among the following Padma Bhushan awardee dancers was called to perform for the coronation festivities of Queen Elizabeth II?

- Ans
- 1. Birju Maharaj
 - 2. Kumari Kamala
 - 3. Yamini Krishnamurthy
 - 4. Alarmel Velli

Question ID : 264330112878
Option 1 ID : 264330443597
Option 2 ID : 264330443600
Option 3 ID : 264330443598
Option 4 ID : 264330443599
Status : Not Answered
Chosen Option : --

Q.12 Freedom of Conscience provided in Article 25 of the Constitution of India is strengthened by which of the following two articles?

- Ans** 1. Article 27 and 28
 2. Article 27 and 29
 3. Article 26 and 28
 4. Article 24 and 28

Question ID : 264330110580
Option 1 ID : 264330434600
Option 2 ID : 264330434598
Option 3 ID : 264330434599
Option 4 ID : 264330434597
Status : Not Answered
Chosen Option : --

Q.13 The Article 350 (B) of the Indian Constitution deals with the .

- Ans** 1. finance commission
 2. election commission
 3. special officer for linguistic minorities
 4. UPSC

Question ID : 26433089965
Option 1 ID : 264330353340
Option 2 ID : 264330353338
Option 3 ID : 264330353339
Option 4 ID : 264330353337
Status : Answered
Chosen Option : 3

Q.14 Who wrote the novel 'Train to Pakistan'?

- Ans** 1. Vikram Seth
 2. Mulk Raj Anand
 3. Khushwant Singh
 4. Bhasham Sahni

Question ID : 26433064225
Option 1 ID : 264330251495
Option 2 ID : 264330251492
Option 3 ID : 264330251493
Option 4 ID : 264330251494
Status : Answered
Chosen Option : 3

Q.15 Which of the following union territories recorded the highest sex ratio at birth in India in 2020 as per annual report on vital statistics based on Civil Registration System Report?

- Ans** 1. Jammu and Kashmir
 2. Ladakh
 3. Lakshadweep
 4. Chandigarh

Question ID : 264330177911
Option 1 ID : 264330697734
Option 2 ID : 264330697733
Option 3 ID : 264330697731
Option 4 ID : 264330697732
Status : Not Answered
Chosen Option : --

Q.16 The original Constitution contained 395 Articles divided into _____ parts.

Ans 1. 22

2. 19

3. 21

4. 24

Question ID : 264330134565

Option 1 ID : 264330527215

Option 2 ID : 264330527216

Option 3 ID : 264330527217

Option 4 ID : 264330527218

Status : Answered

Chosen Option : 1

Q.17 Norman Borlaug, known as the Father of Green Revolution for the world, belongs to which country?

Ans 1. US

2. New Zealand

3. Australia

4. Germany

Question ID : 26433054811

Option 1 ID : 264330214231

Option 2 ID : 264330214229

Option 3 ID : 264330214228

Option 4 ID : 264330214230

Status : Answered

Chosen Option : 1

Q.18 In which country was the Theosophical Society founded?

Ans 1. England

2. America

3. France

4. Japan

Question ID : 264330114050

Option 1 ID : 264330448286

Option 2 ID : 264330448288

Option 3 ID : 264330448285

Option 4 ID : 264330448287

Status : Answered

Chosen Option : 1

Q.19 What are the most common type of earthquakes?

Ans 1. Volcanic earthquakes

2. Seismic earthquakes

3. Reservoir earthquakes

4. Tectonic earthquakes

Question ID : 264330134900

Option 1 ID : 264330528535

Option 2 ID : 264330528538

Option 3 ID : 264330528536

Option 4 ID : 264330528537

Status : Answered

Chosen Option : 4

Q.20 Which government scheme's main aim is to 'transform rural poor youth into an economically independent and globally relevant workforce'?

- Ans
- 1. Shyama Prasad Mukherjee Rurban Mission
 - 2. National Career Service
 - 3. Deen Dayal Upadhyaya Grameen Kaushalya Yojana
 - 4. Deendayal Antyodaya Yojana- National Rural Livelihood Mission

Question ID : 264330109413
Option 1 ID : 264330429931
Option 2 ID : 264330429932
Option 3 ID : 264330429930
Option 4 ID : 264330429929
Status : Answered
Chosen Option : 3

Q.21 Who among the following personalities is an award-winning Mohiniyattam Dancer?

- Ans
- 1. Meenakshi Chitharanjan
 - 2. Vasundhara Doraswamy
 - 3. Neena Prasad
 - 4. Sutapa Talukdar

Question ID : 264330181386
Option 1 ID : 264330711467
Option 2 ID : 264330711469
Option 3 ID : 264330711468
Option 4 ID : 264330711470
Status : Not Answered
Chosen Option : --

Q.22 The scheme called Bringing Green Revolution to Eastern India is being implemented in how many eastern states?

- Ans
- 1. Four
 - 2. Seven
 - 3. Three
 - 4. Six

Question ID : 264330109401
Option 1 ID : 264330429882
Option 2 ID : 264330429884
Option 3 ID : 264330429881
Option 4 ID : 264330429883
Status : Answered
Chosen Option : 2

Q.23 According to Census of India, 2011 Which of the following is in the top three states with highest population of age 0-6 years?

- Ans
- 1. Maharashtra
 - 2. Assam
 - 3. Kerala
 - 4. Madhya Pradesh

Question ID : 264330119969
Option 1 ID : 264330470153
Option 2 ID : 264330470151
Option 3 ID : 264330470154
Option 4 ID : 264330470152
Status : Not Answered
Chosen Option : --

Q.24 India announced the NEP in 1991. NEP stands for _____ .

- Ans 1. New Economic Policy
 2. National Export Plan
 3. National Economic Policy
 4. New Economic Provision

Question ID : 264330109128
Option 1 ID : 264330428790
Option 2 ID : 264330428792
Option 3 ID : 264330428791
Option 4 ID : 264330428789
Status : Answered
Chosen Option : 3

Q.25 Shambhu Maharaj was conferred the Sangeet Natak Akademi Fellowship for which form of dance?

- Ans 1. Kuchipudi
 2. Kathak
 3. Bharatanatyam
 4. Manipuri

Question ID : 26433074870
Option 1 ID : 264330293569
Option 2 ID : 264330293570
Option 3 ID : 264330293571
Option 4 ID : 264330293568
Status : Answered
Chosen Option : 2

Q.26 Gross national product is the total market value of all final goods and services produced by _____.

- Ans 1. nationals and NRIs of a country during a period of five years
 2. Country's residents over a period of time
 3. national and foreigners during a period of two years
 4. nationals of a country during a period of five year

Question ID : 264330120880
Option 1 ID : 264330473737
Option 2 ID : 264330473735
Option 3 ID : 264330473736
Option 4 ID : 264330473738
Status : Answered
Chosen Option : 2

Q.27 At which Olympic Games did the Indian hockey men's team win its last gold medal?

- Ans 1. 2008
 2. 1980
 3. 2012
 4. 1996

Question ID : 264330110374
Option 1 ID : 264330433775
Option 2 ID : 264330433773
Option 3 ID : 264330433776
Option 4 ID : 264330433774
Status : Answered
Chosen Option : 2

Q.28 Select the most appropriate option with respect to the correctness of the following statements.

- a) India has great potential for the development of tidal energy.
- b) A geothermal energy plant has been commissioned at Manikaran in Himachal Pradesh.

- Ans**
- 1. Both a and b are correct
 - 2. Only a is correct
 - 3. Both a and b are incorrect
 - 4. Only b is correct

Question ID : 264330179017
Option 1 ID : 264330702073
Option 2 ID : 264330702071
Option 3 ID : 264330702074
Option 4 ID : 264330702072
Status : Marked For Review
Chosen Option : 1

Q.29 Which of the following parts/structures is located at the topmost part of a Stupa?

- Ans**
- 1. Torana
 - 2. Harmika
 - 3. Vedika
 - 4. Medhi

Question ID : 264330165323
Option 1 ID : 264330648374
Option 2 ID : 264330648371
Option 3 ID : 264330648373
Option 4 ID : 264330648372
Status : Answered
Chosen Option : 1

Q.30 Sandeep Das is famous for playing which of the following percussion instruments?

- Ans**
- 1. Pakhawaj
 - 2. Tabla
 - 3. Kanjira
 - 4. Ghatam

Question ID : 264330111939
Option 1 ID : 264330439842
Option 2 ID : 264330439844
Option 3 ID : 264330439841
Option 4 ID : 264330439843
Status : Not Answered
Chosen Option : --

Q.31 Arakan and Shan are recognised ethnic groups of _____.

- Ans 1. Myanmar
 2. Sri Lanka
 3. Nepal
 4. Bhutan

Question ID : 264330177916
Option 1 ID : 264330697753
Option 2 ID : 264330697754
Option 3 ID : 264330697752
Option 4 ID : 264330697751
Status : Not Answered
Chosen Option : --

Q.32 In which of the following States was the 37th National Junior Athletics Championship held?

- Ans 1. Manipur
 2. Nagaland
 3. Assam
 4. Mizoram

Question ID : 264330113757
Option 1 ID : 264330447116
Option 2 ID : 264330447115
Option 3 ID : 264330447113
Option 4 ID : 264330447114
Status : Not Answered
Chosen Option : --

Q.33 Who among the following introduced binominal nomenclature of biological classification?

- Ans 1. Aristotle
 2. John Ray
 3. Charles Darwin
 4. Linnaeus

Question ID : 264330117587
Option 1 ID : 264330462374
Option 2 ID : 264330462375
Option 3 ID : 264330462376
Option 4 ID : 264330462373
Status : Not Answered
Chosen Option : --

Q.34 According to the PRS report of the Ministry of Agriculture, which two crops contributed to 78% of the country's food grain production till 2015-16?

- Ans 1. Maize and soybeans
 2. Millets and pulses
 3. Wheat and rice
 4. Pulses and sugarcane

Question ID : 264330120359
Option 1 ID : 264330471687
Option 2 ID : 264330471690
Option 3 ID : 264330471689
Option 4 ID : 264330471688
Status : Answered
Chosen Option : 3

Q.35 Coal, petroleum, and kerosene are examples of:

- Ans
- 1. coal fuels
 - 2. fossil fuels
 - 3. renewable resources
 - 4. clean energy resources

Question ID : 264330120955
Option 1 ID : 264330474035
Option 2 ID : 264330474037
Option 3 ID : 264330474036
Option 4 ID : 264330474038
Status : Answered
Chosen Option : 2

Q.36 Which Constitutional Amendment Act amended Article 38, enumerated under the Directive Principles of State Policy, and directed 'State to minimise inequalities in income, status, facilities and opportunities'?

- Ans
- 1. 43
 - 2. 42
 - 3. 44
 - 4. 40

Question ID : 264330119697
Option 1 ID : 264330469065
Option 2 ID : 264330469064
Option 3 ID : 264330469066
Option 4 ID : 264330469063
Status : Answered
Chosen Option : 2

Q.37 Why did Mother Teresa establish the 'Nirmal Hriday' Hospice?

- Ans
- 1. To provide a place where the terminally ill could die in peace
 - 2. To provide a home for orphan girl-children
 - 3. To provide a refuge for patients of leprosy
 - 4. To provide a home for young widows

Question ID : 264330119011
Option 1 ID : 264330466702
Option 2 ID : 264330466700
Option 3 ID : 264330466699
Option 4 ID : 264330466701
Status : Answered
Chosen Option : 3

Q.38 Which of the following correctly describes chemotherapy?

- Ans
- 1. Use of motivational advice as treatment
 - 2. Use of physical exercise for treatment
 - 3. Use of chemicals for therapeutic purposes
 - 4. Use of treatment for behavioural disorder

Question ID : 264330120017
Option 1 ID : 264330470325
Option 2 ID : 264330470324
Option 3 ID : 264330470323
Option 4 ID : 264330470326
Status : Answered
Chosen Option : 3

Q.39 Who was the first Indian to qualify for the covenanted civil services in India?

- Ans
- 1. Surendra Nath Banerjee
 - 2. Subhas Chandra Bose
 - 3. Satyendra Nath Tagore
 - 4. Rajagopalachari

Question ID : 264330120303
Option 1 ID : 264330471465
Option 2 ID : 264330471464
Option 3 ID : 264330471463
Option 4 ID : 264330471466
Status : Marked For Review
Chosen Option : 3

Q.40 What is the sanctioned judge strength of the Supreme Court excluding Chief Justice of India as per the Supreme Court (Number of Judges) Amendment Act, 2019?

- Ans
- 1. Ten
 - 2. Thirty-Three
 - 3. Twenty-One
 - 4. Twenty-Eight

Question ID : 264330183153
Option 1 ID : 264330718344
Option 2 ID : 264330718347
Option 3 ID : 264330718345
Option 4 ID : 264330718346
Status : Answered
Chosen Option : 2

Q.41 'Shaka' is the Indian term used for the people called Scythians, who originally belonged to _____.

- Ans
- 1. central Asia
 - 2. south-western Asia
 - 3. south-eastern Asia
 - 4. eastern Asia

Question ID : 264330118961
Option 1 ID : 264330466499
Option 2 ID : 264330466502
Option 3 ID : 264330466501
Option 4 ID : 264330466500
Status : Not Answered
Chosen Option : --

Q.42 Who was the leader of the southern military campaign of Alauddin Khalji?

- Ans
- 1. Aadham Khan
 - 2. Mahmud Ganva
 - 3. Malik Kafur
 - 4. Malik Sarvar

Question ID : 264330114034
Option 1 ID : 264330448223
Option 2 ID : 264330448221
Option 3 ID : 264330448224
Option 4 ID : 264330448222
Status : Answered
Chosen Option : 3

Q.43 मुगल अधिकारी अमल-गुजार मुख्य रूप से _____ का कार्य करते थे।

- Ans
- 1. शाही उद्यान की बागवानी
 - 2. सैनिकों की भर्ती
 - 3. भू-राजस्व एकत्रित करने
 - 4. शाही परिवार को सुरक्षा प्रदान करने

Question ID : 264330119487
Option 1 ID : 264330468232
Option 2 ID : 264330468231
Option 3 ID : 264330468234
Option 4 ID : 264330468233
Status : Not Answered
Chosen Option : --

Q.44 साकेवा एक धार्मिक त्योहार है जो _____ के किरात खंबू राई समुदाय द्वारा मनाया जाता है।

- Ans
- 1. मध्य प्रदेश
 - 2. सिक्किम
 - 3. झारखंड
 - 4. पंजाब

Question ID : 264330106218
Option 1 ID : 264330417173
Option 2 ID : 264330417175
Option 3 ID : 264330417174
Option 4 ID : 264330417176
Status : Not Answered
Chosen Option : --

Q.45 Who among the following is known as the tabla maestro?

- Ans
- 1. Ustad Bismillah Khan
 - 2. Ghulam Ali
 - 3. Ustad Amjad Ali Khan
 - 4. Ustad Zakir Hussain

Question ID : 264330116425
Option 1 ID : 264330457787
Option 2 ID : 264330457788
Option 3 ID : 264330457786
Option 4 ID : 264330457785
Status : Answered
Chosen Option : 4

Q.46 A solution contains 50 g of sugar in 450 g of water. Calculate the concentration in terms of mass by mass percentage of the solution.

- Ans
- 1. 0.1%
 - 2. 10%
 - 3. 1%
 - 4. 0.01%

Question ID : 264330173643
Option 1 ID : 264330681053
Option 2 ID : 264330681051
Option 3 ID : 264330681052
Option 4 ID : 264330681054
Status : Answered
Chosen Option : 2

Q.47 Which special symbol is commonly used by geologists to describe the orientation of rock beds, faults, fractures, cuestas, igneous dikes and sills?

- Ans
- 1. Scale Indicator
 - 2. Average directional index
 - 3. Strike and dip
 - 4. Compass rose

Question ID : 264330131020
Option 1 ID : 264330513191
Option 2 ID : 264330513192
Option 3 ID : 264330513193
Option 4 ID : 264330513194
Status : Answered
Chosen Option : 3

Q.48 Which of the following dynasties arose as a result of Alexander's invasion?

- Ans
- 1. Maurya
 - 2. Pandya
 - 3. Chalukya
 - 4. Pallava

Question ID : 264330120134
Option 1 ID : 264330470791
Option 2 ID : 264330470792
Option 3 ID : 264330470793
Option 4 ID : 264330470794
Status : Answered
Chosen Option : 1

Q.49 The phenomenon of liquidity trap is based upon which of the following aspects of demand for money?

- Ans
- 1. Precautionary
 - 2. Velocity of circulation
 - 3. Transaction
 - 4. Speculative

Question ID : 264330111567
Option 1 ID : 264330438354
Option 2 ID : 264330438356
Option 3 ID : 264330438353
Option 4 ID : 264330438355
Status : Not Answered
Chosen Option : --

Q.50 The process of removing government-imposed limits or impediments is known as:

- Ans
- 1. liberalisation
 - 2. financial investments
 - 3. privatisation
 - 4. globalisation

Question ID : 264330110191
Option 1 ID : 264330433044
Option 2 ID : 264330433041
Option 3 ID : 264330433042
Option 4 ID : 264330433043
Status : Answered
Chosen Option : 1

Q.1 Study the given pattern carefully and select the number that can replace the question mark (?) in it.
 First row - 56, 16, 60
 Second row - 64, 18, 68
 Third row - 72, 20, ?
 (NOTE : Operations should be performed on the whole numbers, without breaking down the numbers into its constituent digits. Eg. 13 – Operations on 13 such as adding /subtracting/multiplying etc. to 13 can be performed. Breaking down 13 into 1 and 3 and then performing mathematical operations on 1 and 3 is not allowed)

- Ans
- 1. 75
 - 2. 74
 - 3. 76
 - 4. 78

Question ID : 26433087330
 Option 1 ID : 264330342957
 Option 2 ID : 264330342958
 Option 3 ID : 264330342960
 Option 4 ID : 264330342959
 Status : Answered
 Chosen Option : 3

Q.2 Select the option that represents the letters that, when sequentially placed from left to right in the blanks below, will complete the letter series.
 D _ A _ W _ S _ E W _ S A E _ D _ A E _

- Ans
- 1. SEDADWSW
 - 2. SEDADWES
 - 3. SEDADSSW
 - 4. SEADESW

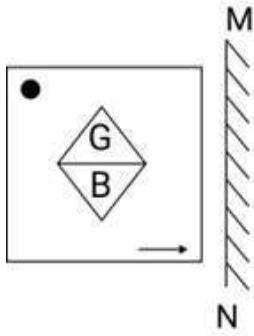
Question ID : 26433092540
 Option 1 ID : 264330363450
 Option 2 ID : 264330363452
 Option 3 ID : 264330363451
 Option 4 ID : 264330363449
 Status : Answered
 Chosen Option : 1

Q.3 Six students are sitting around a circular table facing the centre. Udit is an immediate neighbour of both Uday and Unnati. Umesh is sitting second to the right of Unnati. Utpal is sitting third to the left of Uday. Utsav is an immediate neighbour of both Umesh and Uday. Who is an immediate neighbour of both Umesh and Unnati?

- Ans
- 1. Utpal
 - 2. Uday
 - 3. Utsav
 - 4. Udit

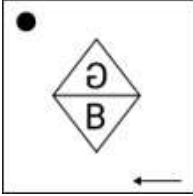
Question ID : 264330110717
 Option 1 ID : 264330435146
 Option 2 ID : 264330435148
 Option 3 ID : 264330435145
 Option 4 ID : 264330435147
 Status : Answered
 Chosen Option : 1

Q.4 Select the correct mirror image of the given combination when the mirror is placed at 'MN' as shown below.

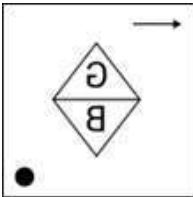


Ans

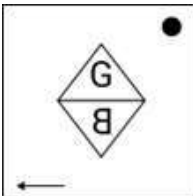
✗ 1.



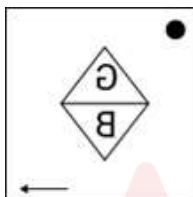
✗ 2.



✗ 3.



✓ 4.



Question ID : 264330130769

Option 1 ID : 264330512188

Option 2 ID : 264330512189

Option 3 ID : 264330512187

Option 4 ID : 264330512190

Status : Answered

Chosen Option : 4

Q.5 Read the given statements and conclusions carefully. Assuming that the information given in the statements is true, even if it appears to be at variance with commonly known facts, decide which of the given conclusions logically follow(s) from the statements.

Statements:

Some stars are planets.

All stars are comets.

Conclusions:

I. Some comets are planets.

II. Some planets are stars.

- Ans**
- 1. Only conclusion I follows
 - 2. Only conclusion II follows
 - 3. Both conclusions I and II follow
 - 4. Neither conclusion I nor II follows

Question ID : 26433068294

Option 1 ID : 264330267688

Option 2 ID : 264330267689

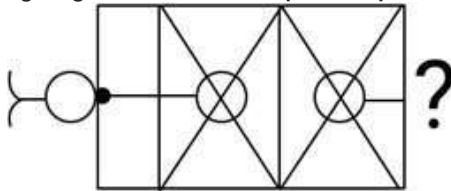
Option 3 ID : 264330267690

Option 4 ID : 264330267691

Status : Answered

Chosen Option : 3

Q.6 Select the figure from the given options that will replace the question mark (?) in the figure given below and complete the pattern.



Ans



Question ID : 264330111713

Option 1 ID : 264330438937

Option 2 ID : 264330438940

Option 3 ID : 264330438938

Option 4 ID : 264330438939

Status : Answered

Chosen Option : 1

Q.7 Which figure should replace the question mark (?) in the following series to continue the pattern?

L O S T	8 S O L	L 8 T S	O T 8 L	?
8 □ □	T O □ □	S		

Ans

1. 8 O T S
L □

2. L O T 8
S □

3. L O S T
8 □

4. L O T S
8 □

Question ID : 264330129615

Option 1 ID : 264330507828

Option 2 ID : 264330507826

Option 3 ID : 264330507827

Option 4 ID : 264330507829

Status : Answered

Chosen Option : 3

Q.8 14 is related to 27 following a certain logic. Following the same logic, 17 is related to 33. To which of the following is 24 related following the same logic?

Ans 1. 53

2. 47

3. 56

4. 50

Question ID : 264330178748

Option 1 ID : 264330701021

Option 2 ID : 264330701020

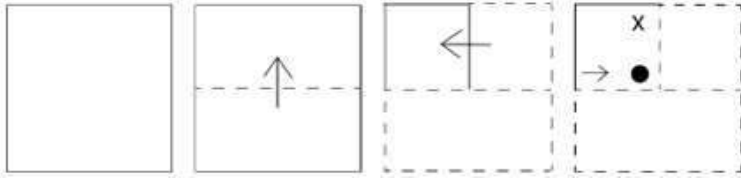
Option 3 ID : 264330701019

Option 4 ID : 264330701022

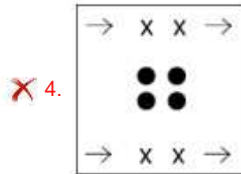
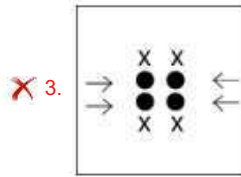
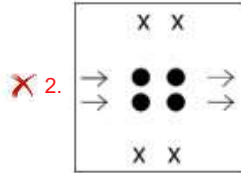
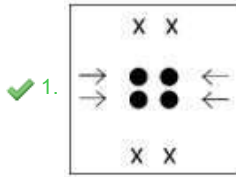
Status : Answered

Chosen Option : 2

Q.9 A paper is folded and cut as shown below. How will it appear when unfolded?



Ans



Question ID : 264330112988

Option 1 ID : 264330444038

Option 2 ID : 264330444040

Option 3 ID : 264330444039

Option 4 ID : 264330444037

Status : Answered

Chosen Option : 1

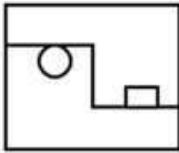
Adda247

Q.10 Select the option in which the given figure is embedded (rotation is NOT allowed).

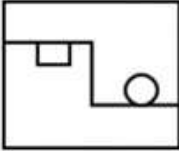


Ans

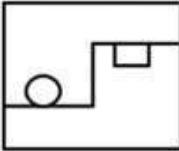
✗ 1.



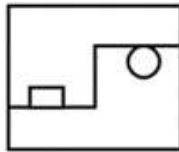
✗ 2.



✗ 3.



✓ 4.



Question ID : 264330101162

Option 1 ID : 264330397193

Option 2 ID : 264330397195

Option 3 ID : 264330397196


Option 4 ID : 264330397194

Status : Answered

Chosen Option : 4

Adda247

Q.11 Select the figure that will come next in the following figure series.



Ans

✓ 1.



✗ 2.



✗ 3.



✗ 4.



Question ID : 26433091695

Option 1 ID : 264330360148

Option 2 ID : 264330360145

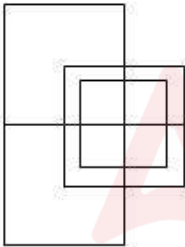
Option 3 ID : 264330360146

Option 4 ID : 264330360147

Status : Answered

Chosen Option : 1

Q.12 How many squares are there in the following figure?



Ans ✗ 1. 10

✓ 2. 12

✗ 3. 14

✗ 4. 15

Question ID : 26433076733

Option 1 ID : 264330300996

Option 2 ID : 264330300997

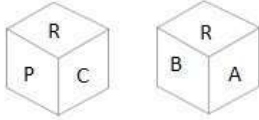
Option 3 ID : 264330300998

Option 4 ID : 264330300999

Status : Answered

Chosen Option : 2

Q.13 Six letters A, B, C, P, Q and R are written on different faces of a dice. Two positions of this dice are shown in the figure. Find the letter on the face opposite to C.



- Ans 1. B
 2. P
 3. A
 4. Q

Question ID : 264330109204

Option 1 ID : 264330429096

Option 2 ID : 264330429093

Option 3 ID : 264330429094

Option 4 ID : 264330429095

Status : Answered

Chosen Option : 3



Q.14 Which of the following option figures will complete the pattern in the figure given below?



Ans

✗ 1.



✓ 2.



✗ 3.



✗ 4.

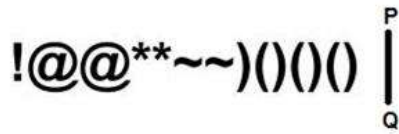


Question ID : 26433080626
Option 1 ID : 264330316438
Option 2 ID : 264330316437
Option 3 ID : 264330316440
Option 4 ID : 264330316439

Status : Answered

Chosen Option : 2

Q.15 Select the correct mirror image of the given figure when the mirror is placed at PQ as shown below.



Ans

- ✗ 1.)()()~**@!
- ✗ 2. ()()(**@~!
- ✗ 3. ()()(**~~@!
- ✓ 4. ()()(~**@!

Question ID : 26433082020
 Option 1 ID : 264330321914
 Option 2 ID : 264330321916
 Option 3 ID : 264330321915
 Option 4 ID : 264330321913

Status : Answered

Chosen Option : 4

Q.16 Which two signs should be interchanged to make the given equation correct?
 $35 + 76 - 98 \div 3 \times 6 = 62$

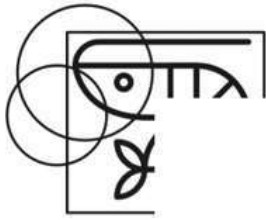
- Ans
- ✓ 1. + and ×
 - ✗ 2. = and ×
 - ✗ 3. + and ×
 - ✗ 4. - and +

Question ID : 26433090220
 Option 1 ID : 264330354359
 Option 2 ID : 264330354360
 Option 3 ID : 264330354358
 Option 4 ID : 264330354357

Status : Answered

Chosen Option : 1

Q.17 Which of the following option figures will complete the pattern in the figure given below?



Ans

✗ 1.



✓ 2.



✗ 3.



✗ 4.



Question ID : 26433080630

Option 1 ID : 264330316454

Option 2 ID : 264330316453

Option 3 ID : 264330316455

Option 4 ID : 264330316456

Status : Answered

Chosen Option : 2

Q.18 Which figure should replace the question mark (?) if the following series were to be continued?

X	S	S	D	D	S	S	↑	↑	S	?
2		X		2		D		2		
T	A	A	2	X	A	A	2	D	A	

Ans

✓ 1.

S	N
↑	
A	2

✗ 2.

S	2
↑	
A	D

✗ 3.

S	D
↑	
A	2

✗ 4.

S	N
A	
2	D

Question ID : 264330103897

Option 1 ID : 264330407889

Option 2 ID : 264330407890

Option 3 ID : 264330407891

Option 4 ID : 264330407892

Status : Answered

Chosen Option : 1

Q.19 Select the number from among the given options that can replace the question mark (?) in the following series.

3, 21, 57, 129, 273, ?

Ans ✗ 1. 234

✓ 2. 561

✗ 3. 456

✗ 4. 345

Question ID : 264330109768

Option 1 ID : 264330431349

Option 2 ID : 264330431352

Option 3 ID : 264330431351

Option 4 ID : 264330431350

Status : Answered

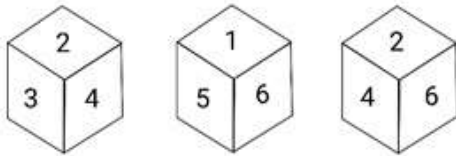
Chosen Option : 2

Q.20 In a code language, if MUSIC is coded as 13-21-19-9-3 and BAND is coded as 2-1-14-4, then how will HARMONIUM be coded?

- Ans
- 1. 7-25-16-12-14-13-8-19-12
 - 2. 8-1-18-13-15-14-9-21-13
 - 3. 7-26-17-12-14-13-8-20-12
 - 4. 8-2-19-12-15-14-9-20-12

Question ID : 26433089481
Option 1 ID : 264330351428
Option 2 ID : 264330351426
Option 3 ID : 264330351427
Option 4 ID : 264330351425
Status : Answered
Chosen Option : 2

Q.21 Three different positions of the same dice are shown. Find the number on the face opposite the face showing '3'.



- Ans
- 1. 2
 - 2. 4
 - 3. 5
 - 4. 6

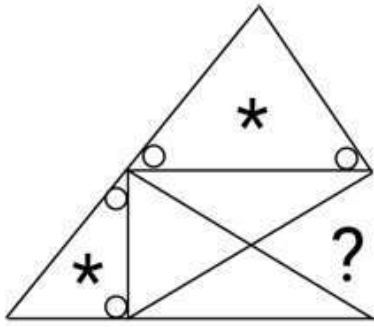
Question ID : 264330116955
Option 1 ID : 264330459901
Option 2 ID : 264330459902
Option 3 ID : 264330459903
Option 4 ID : 264330459904
Status : Answered
Chosen Option : 4

Q.22 Select the option that is related to the third word in the same way as the second word is related to the first word. (The words must be considered as meaningful English words and must NOT be related to each other based on the number of letters/number of consonants/vowels in the word)
Norway: Oslo:: Iran:?

- Ans
- 1. Baghdad
 - 2. Moscow
 - 3. Tehran
 - 4. Madrid

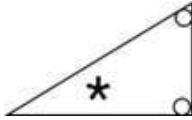
Question ID : 26433069165
Option 1 ID : 264330271173
Option 2 ID : 264330271172
Option 3 ID : 264330271174
Option 4 ID : 264330271175
Status : Answered
Chosen Option : 3

Q.23 Select the figure from the given options that will replace the question mark (?) in the figure given below to complete the pattern.

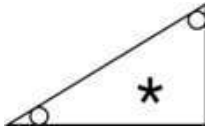


Ans

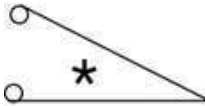
✗ 1.



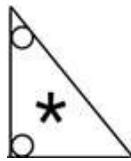
✗ 2.



✗ 3.



✓ 4.



Question ID : 264330116610

Option 1 ID : 264330458525

Option 2 ID : 264330458527

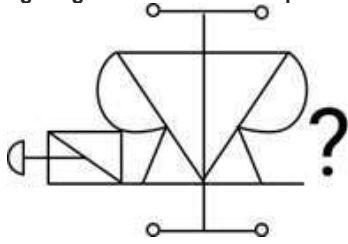
Option 3 ID : 264330458528

Option 4 ID : 264330458526

Status : Answered

Chosen Option : 4

Q.24 Select the figure from the given options that will replace the question mark (?) in the figure given below and complete the pattern.



Ans

- ✓ 1.
- ✗ 2.
- ✗ 3.
- ✗ 4.

Question ID : 264330111716

Option 1 ID : 264330438951

Option 2 ID : 264330438950

Option 3 ID : 264330438949

Option 4 ID : 264330438952

Status : Answered

Chosen Option : 1

Q.25 If A denotes '+', B denotes '×', C denotes '-', and D denotes '÷', then what will come in place of '?' in the following equation?
 $24 D (1 A 7) C 2 A 7 B 12 B (5 C 4) = ?$

Ans ✗ 1. 96

✓ 2. 85

✗ 3. 88

✗ 4. 83

Question ID : 26433081676

Option 1 ID : 264330320538

Option 2 ID : 264330320540

Option 3 ID : 264330320537

Option 4 ID : 264330320539

Status : Answered

Chosen Option : 2

Section : Numerical Ability

Q.1 A certain sum is lent on simple interest at 4% p.a. for 3 years, 8% p.a. for the next 4 years, and 12% p.a. beyond 7 years. If for a period of 11 years, the simple interest obtained is ₹27,600, the sum is (in ₹):

Ans ✗ 1. 28,000

✗ 2. 25,000

✓ 3. 30,000

✗ 4. 32,000

Question ID : 264330119417

Option 1 ID : 264330467955

Option 2 ID : 264330467958

Option 3 ID : 264330467957

Option 4 ID : 264330467956

Status : Answered

Chosen Option : 3

Q.2 A sum of ₹66,550 is taken on loan. This is to be paid back in two equal instalments. If the rate of interest is 20% compounded annually, find the value of each instalment.

- Ans
- 1. ₹42,560
 - 2. ₹44,550
 - 3. ₹40,550
 - 4. ₹43,560

Question ID : 264330104313
Option 1 ID : 264330409554
Option 2 ID : 264330409556
Option 3 ID : 264330409553
Option 4 ID : 264330409555
Status : Answered
Chosen Option : 4

Q.3 The price of an item is to be increased by 25% in two years. This year, the price increased to ₹140 from ₹120. What is the percentage increase in the next year?

- Ans
- 1. 4.71%
 - 2. 4.17%
 - 3. 7.14%
 - 4. 7.41%

Question ID : 264330126101
Option 1 ID : 264330494076
Option 2 ID : 264330494077
Option 3 ID : 264330494079
Option 4 ID : 264330494078
Status : Answered
Chosen Option : 3

Q.4 What is the diameter of a sphere that has a surface area of $2500\pi \text{ cm}^2$?

- Ans
- 1. 40 cm
 - 2. 35 cm
 - 3. 50 cm
 - 4. 25 cm

Question ID : 264330111491
Option 1 ID : 264330438051
Option 2 ID : 264330438050
Option 3 ID : 264330438052
Option 4 ID : 264330438049
Status : Answered
Chosen Option : 3

Q.5 The price of an article has been reduced by 20%. In order to restore the original price, the new price must be increased by:

- Ans
- 1. 25%
 - 2. 20%
 - 3. 22%
 - 4. 28%

Question ID : 264330104160
Option 1 ID : 264330408943
Option 2 ID : 264330408941
Option 3 ID : 264330408942
Option 4 ID : 264330408944
Status : Answered
Chosen Option : 1

Q.6 Which of the following is the smallest ratio?

- Ans 1. 15 : 20
 2. 7 : 21
 3. 21 : 25
 4. 17 : 25

Question ID : 264330119337
Option 1 ID : 264330467636
Option 2 ID : 264330467635
Option 3 ID : 264330467637
Option 4 ID : 264330467638
Status : Answered
Chosen Option : 2

Q.7 If Malay buys guavas at ₹300 per kg and sells them at ₹25 per 100 gm., then he will have (rounded off to 2 decimal places):

- Ans 1. a loss of 16.67%
 2. a profit of 25.25%
 3. a loss of 25.25%
 4. a profit of 16.67%

Question ID : 264330112427
Option 1 ID : 264330441794
Option 2 ID : 264330441795
Option 3 ID : 264330441796
Option 4 ID : 264330441793
Status : Answered
Chosen Option : 1

Q.8 If 25 people, working 15 hours a day, can complete 5 units of work in 8 days, then how many days will be required by 12 people to complete 10 units of work, working 20 hours a day?

- Ans 1. 25 days
 2. 24 days
 3. 20 days
 4. 22 days

Question ID : 264330182576
Option 1 ID : 264330716098
Option 2 ID : 264330716097
Option 3 ID : 264330716095
Option 4 ID : 264330716096
Status : Answered
Chosen Option : 1

Q.9 If a solid sphere of radius 20 cm is moulded into 8 solid spherical balls of equal radius, then the radius of each ball will be: (Where $\pi = \frac{22}{7}$)

- Ans 1. 10 cm
 2. 12.5 cm
 3. 11.5 cm
 4. 11 cm

Question ID : 264330118139
Option 1 ID : 264330464372
Option 2 ID : 264330464374
Option 3 ID : 264330464371
Option 4 ID : 264330464373
Status : Answered
Chosen Option : 1

Q.10 Meera made a profit of 5% by selling a bag after offering a discount of 10%. If the marked price of bag is ₹1,050, find its cost price.

- Ans 1. ₹850
 2. ₹900
 3. ₹508
 4. ₹1,000

Question ID : 264330118127
Option 1 ID : 264330464323
Option 2 ID : 264330464325
Option 3 ID : 264330464326
Option 4 ID : 264330464324
Status : Answered
Chosen Option : 2

Q.11 What is the sum of the square of the prime numbers between 20 and 30?

- Ans 1. 1500
 2. 1370
 3. 1290
 4. 1276

Question ID : 264330104347
Option 1 ID : 264330409690
Option 2 ID : 264330409692
Option 3 ID : 264330409689
Option 4 ID : 264330409691
Status : Answered
Chosen Option : 2

Q.12 The average of $1^2, 2^2, 3^2, 4^2, 5^2, 6^2, 7^2, 8^2$ and 9^2 is:

- Ans
- 1. $31\frac{2}{3}$
 - 2. $32\frac{1}{3}$
 - 3. $34\frac{2}{3}$
 - 4. $33\frac{1}{3}$

Question ID : 264330126169
Option 1 ID : 264330494349
Option 2 ID : 264330494350
Option 3 ID : 264330494351
Option 4 ID : 264330494348
Status : Answered
Chosen Option : 1

Q.13 What will be the least common multiple of four numbers 15, 35, 42 and 72?

- Ans
- 1. 2550
 - 2. 2050
 - 3. 2520
 - 4. 2025

Question ID : 264330103916
Option 1 ID : 264330407966
Option 2 ID : 264330407968
Option 3 ID : 264330407967
Option 4 ID : 264330407965
Status : Answered
Chosen Option : 3

Q.14 A train approaches a tunnel MN. Inside the tunnel is a dog located at a point that is $\frac{2}{5}$ of the distance MN measured from the entrance M. When the train whistles, the dog runs. If the dog moves towards the entrance of the tunnel M, the train catches the dog exactly at the entrance M. If the dog moves towards the exit N, the train catches the dog exactly at the exit N. Find the ratio of the speed of the dog to that of the train?

- Ans
- 1. 5 : 1
 - 2. 2 : 1
 - 3. 1 : 2
 - 4. 1 : 5

Question ID : 264330106349
Option 1 ID : 264330417697
Option 2 ID : 264330417700
Option 3 ID : 264330417699
Option 4 ID : 264330417698
Status : Answered
Chosen Option : 4

Q.15 The highest common factor (HCF) of 256, 136 and 436 is _____.

- Ans
- 1. 2
 - 2. 4
 - 3. 8
 - 4. 12

Question ID : 264330112056
Option 1 ID : 264330440309
Option 2 ID : 264330440310
Option 3 ID : 264330440311
Option 4 ID : 264330440312
Status : Answered
Chosen Option : 2

Section : Computer Proficiency

Q.1 Which text alignment option in Microsoft Word 365 aligns text along the left margin?

- Ans
- 1. Center Align
 - 2. Left Align
 - 3. Right Align
 - 4. Justify

Question ID : 264330180729
Option 1 ID : 264330708885
Option 2 ID : 264330708883
Option 3 ID : 264330708884
Option 4 ID : 264330708886
Status : Answered
Chosen Option : 2

Q.2 What action should be taken to add a new row or column in a spreadsheet?

- Ans
- 1. Right-click on an existing row or column and select 'Insert' from the context menu.
 - 2. Use the 'Find and Replace' function to search for a specific cell, and then insert a new row or column using the results.
 - 3. Highlight a range of cells, right-click, and choose 'Delete' from the context menu to create space for the new row or column.
 - 4. Select a row or column, press the 'Ctrl+X' keyboard shortcut to cut it, and then press 'Ctrl+V' to paste it in the desired location.

Question ID : 264330173327
Option 1 ID : 264330679787
Option 2 ID : 264330679790
Option 3 ID : 264330679789
Option 4 ID : 264330679788
Status : Answered
Chosen Option : 1

Q.3 In Microsoft Excel 365, which tool should we use for creating or editing formulas in a worksheet?

- Ans
- 1. Formula bar
 - 2. Watch window
 - 3. Precedents
 - 4. Auditing toolbar

Question ID : 264330182055
Option 1 ID : 264330714059
Option 2 ID : 264330714062
Option 3 ID : 264330714060
Option 4 ID : 264330714061
Status : Answered
Chosen Option : 1

Q.4 In which of the following tabs in MS Word 365 is Bullets and Numbering present?

- Ans
- 1. Page layout
 - 2. Home
 - 3. Edit
 - 4. File

Question ID : 264330180419
Option 1 ID : 264330707646
Option 2 ID : 264330707644
Option 3 ID : 264330707645
Option 4 ID : 264330707643
Status : Answered
Chosen Option : 1

Q.5 What is the purpose of the CC field in an email?

- Ans
- 1. To include additional recipients who should be kept informed
 - 2. To request a read receipt from the recipient
 - 3. To encrypt the email for added security
 - 4. To indicate that the email is of high importance

Question ID : 264330174461
Option 1 ID : 264330684263
Option 2 ID : 264330684265
Option 3 ID : 264330684266
Option 4 ID : 264330684264
Status : Answered
Chosen Option : 1

Q.6 Which of the following shortcut key is used to insert a hyperlink in MS Word 365?

- Ans
- 1. Shift + H
 - 2. Ctrl + K
 - 3. Ctrl + H
 - 4. Shift + K

Question ID : 264330178571
Option 1 ID : 264330700314
Option 2 ID : 264330700311
Option 3 ID : 264330700312
Option 4 ID : 264330700313
Status : Answered
Chosen Option : 2

Q.7 What does the following icon resemble in MS Word 365 ?



- Ans
- 1. Justifying
 - 2. Right alignment
 - 3. Centre of text
 - 4. Left alignment

Question ID : 264330180451
Option 1 ID : 264330707774
Option 2 ID : 264330707771
Option 3 ID : 264330707773
Option 4 ID : 264330707772
Status : Answered
Chosen Option : 2

Q.8 What does the 'Orientation' option in the Page Setup menu in Microsoft Word 365 allow you to change?

- Ans
- 1. Text alignment
 - 2. Page layout (portrait or landscape)
 - 3. Font style
 - 4. Page size

Question ID : 264330180721
Option 1 ID : 264330708853
Option 2 ID : 264330708854
Option 3 ID : 264330708851
Option 4 ID : 264330708852
Status : Answered
Chosen Option : 2

Q.9 Which of the following is a private network that is typically open to external parties, such as business partners, suppliers, and key customers?

- Ans
- 1. Telnet
 - 2. Extranet
 - 3. Intranet
 - 4. Internet

Question ID : 264330178246
Option 1 ID : 264330699042
Option 2 ID : 264330699041
Option 3 ID : 264330699039
Option 4 ID : 264330699040
Status : Answered
Chosen Option : 1

Q.10 Which of the following is the correct way to sort a range of cells in ascending order in MS Excel 365?

- Ans**
- 1. Select the range of cells and press 'Ctrl + Shift + S'.
 - 2. Click on the 'Review' tab and select 'Sort'.
 - 3. Click on the 'OK' button.
 - 4. In the 'Sort' dialog box, select the 'Ascending' option in the 'Order' section.

Question ID : 264330178564

Option 1 ID : 264330700283

Option 2 ID : 264330700284

Option 3 ID : 264330700286

Option 4 ID : 264330700285

Status : Answered

Chosen Option : 4



Constable Executive Male and Female in Delhi Police Examination 2023

Roll Number	
Candidate Name	
Venue Name	Tech Testing Solution
Exam Date	15/11/2023
Exam Time	12:00 PM - 1:30 PM
Subject	Constable Executive Male and Female in Delhi Police Examination 2023

Section : General Knowledge

Q.1 Which of the following State Governments organises Surajkund Mela every year?

- Ans 1. Jammu
 2. Haryana
 3. Punjab
 4. Jharkhand

Question ID : 264330106206
Option 1 ID : 264330417126
Option 2 ID : 264330417127
Option 3 ID : 264330417125
Option 4 ID : 264330417128
Status : Answered
Chosen Option : 2

Q.2 The Wazir (minister) of _____ built Moth ki Masjid in Delhi.

- Ans 1. Alauddin Khalji
 2. Khizr Khan
 3. Sikandar Lodi
 4. Firuz Shah Tughluq

Question ID : 264330114076
Option 1 ID : 264330448391
Option 2 ID : 264330448389
Option 3 ID : 264330448390
Option 4 ID : 264330448392
Status : Answered
Chosen Option : 4

Q.3 Which is the most common tidal pattern?

- Ans 1. Mixed tides
 2. Diurnal tides
 3. Spring tides
 4. Semi-diurnal tides

Question ID : 264330116383
Option 1 ID : 264330457619
Option 2 ID : 264330457617
Option 3 ID : 264330457620
Option 4 ID : 264330457618
Status : Answered
Chosen Option : 3

Q.4 Which of the following dance forms belongs to the Vaishnava Monasteries of North East India?

- Ans
- 1. Odissi
 - 2. Mohiniattam
 - 3. Kuchipudi
 - 4. Sattriya

Question ID : 264330106181
Option 1 ID : 264330417028
Option 2 ID : 264330417027
Option 3 ID : 264330417025
Option 4 ID : 264330417026
Status : Answered
Chosen Option : 1

Q.5 How many tiers of government are mentioned in the Constitution of India?

- Ans
- 1. Two
 - 2. Four
 - 3. Three
 - 4. Five

Question ID : 264330133039
Option 1 ID : 264330521209
Option 2 ID : 264330521207
Option 3 ID : 264330521208
Option 4 ID : 264330521210
Status : Answered
Chosen Option : 1

Q.6 When did the Paris Agreement on Climate Change come into force (become effective from)?

- Ans
- 1. 22nd April 2016
 - 2. 4th November 2016
 - 3. 27th January 2017
 - 4. 12th December 2015

Question ID : 264330137310
Option 1 ID : 264330537868
Option 2 ID : 264330537869
Option 3 ID : 264330537870
Option 4 ID : 264330537867
Status : Not Answered
Chosen Option : --

Q.7 Who among the following is associated with the Mridangam instrument?

- Ans
- 1. Zarin S Sharma
 - 2. Hari Prasad Chaurasia
 - 3. Palghat Mani Iyer
 - 4. Ali Akbar Khan

Question ID : 264330111947
Option 1 ID : 264330439873
Option 2 ID : 264330439875
Option 3 ID : 264330439876
Option 4 ID : 264330439874
Status : Answered
Chosen Option : 4

Q.8 According to Census 2011, which group of states have the highest males literacy rates?

- Ans
- 1. Rajasthan and Bihar
 - 2. Kerala and Tamil Nadu
 - 3. Kerala and Mizoram
 - 4. Sikkim and Nagaland

Question ID : 264330119912
Option 1 ID : 264330469923
Option 2 ID : 264330469926
Option 3 ID : 264330469925
Option 4 ID : 264330469924
Status : Answered
Chosen Option : 3

Q.9 According to Census 2011, what was the population density of India?

- Ans
- 1. 382 persons
 - 2. 343 persons
 - 3. 372 persons
 - 4. 362 persons

Question ID : 264330138074
Option 1 ID : 264330540903
Option 2 ID : 264330540906
Option 3 ID : 264330540904
Option 4 ID : 264330540905
Status : Answered
Chosen Option : 1

Q.10 Which of the following statements is correct?

- a) The Indian desert lies towards the eastern margins of the Aravali Hills. It is an undulating sandy plain covered with sand dunes.
- b) This region has arid climate with low vegetation cover and streams appear during the rainy season.

- Ans
- 1. Only a is correct.
 - 2. Both a and b are correct.
 - 3. Only b is correct.
 - 4. Both a and b are incorrect.

Question ID : 264330178101
Option 1 ID : 264330698467
Option 2 ID : 264330698469
Option 3 ID : 264330698468
Option 4 ID : 264330698470
Status : Answered
Chosen Option : 2

Q.11 Who among the following was the first person in British India to get the scholarship of Indian Society of Oriental Arts, established in 1906?

- Ans
- 1. Jagdish Chandra Bose
 - 2. Subrahmanyam Chandrasekhar
 - 3. Nandalal Bose
 - 4. Prafulla Chandra Roy

Question ID : 264330120264
Option 1 ID : 264330471313
Option 2 ID : 264330471311
Option 3 ID : 264330471312
Option 4 ID : 264330471314
Status : Answered
Chosen Option : 4

Q.12 Which state has two headquarters of Indian Railway Zones?

- Ans
- 1. Rajasthan
 - 2. Uttar Pradesh
 - 3. Bihar
 - 4. Assam

Question ID : 264330182904
Option 1 ID : 264330717360
Option 2 ID : 264330717361
Option 3 ID : 264330717362
Option 4 ID : 264330717363
Status : Answered
Chosen Option : 2

Q.13 Untouchability is against which of the following fundamental rights?

- Ans
- 1. Right to freedom of religion
 - 2. Right to constitutional remedy
 - 3. Right to liberty
 - 4. Right to equality

Question ID : 264330109838
Option 1 ID : 264330431631
Option 2 ID : 264330431632
Option 3 ID : 264330431630
Option 4 ID : 264330431629
Status : Answered
Chosen Option : 4

Q.14 Elections under which act gave the control of seven provinces in 1937 to the Congress?

- Ans
- 1. Government of India Act, 1935
 - 2. Government of India Act, 1937
 - 3. Provincial Act, 1935
 - 4. Municipalities Act, 1935

Question ID : 264330120148
Option 1 ID : 264330470847
Option 2 ID : 264330470850
Option 3 ID : 264330470849
Option 4 ID : 264330470848
Status : Answered
Chosen Option : 3

Q.15 Turmeric powder is adulterated with:

- Ans 1. lead chromate
 2. zinc carbonate
 3. silicon oxide
 4. magnesium chloride

Question ID : 264330120973
Option 1 ID : 264330474109
Option 2 ID : 264330474108
Option 3 ID : 264330474107
Option 4 ID : 264330474110
Status : Answered
Chosen Option : 4

Q.16 In which king's honour and praise was the Prayag Prashasti written by the Sanskrit poet Harisena?

- Ans 1. Vikramaditya
 2. Chandragupta
 3. Samudragupta
 4. Ashoka

Question ID : 264330118958
Option 1 ID : 264330466490
Option 2 ID : 264330466487
Option 3 ID : 264330466489
Option 4 ID : 264330466488
Status : Answered
Chosen Option : 3

Q.17 When was the Bengal Partition Plan implemented?

- Ans 1. 10 September 1910
 2. 16 October 1905
 3. 7 August 1899
 4. 15 August 1915

Question ID : 264330114043
Option 1 ID : 264330448259
Option 2 ID : 264330448258
Option 3 ID : 264330448257
Option 4 ID : 264330448260
Status : Answered
Chosen Option : 2

Q.18 Gram Nyayalaya Act was enacted in the year _____.

- Ans 1. 2006
 2. 2008
 3. 2000
 4. 2004

Question ID : 264330120179
Option 1 ID : 264330470973
Option 2 ID : 264330470974
Option 3 ID : 264330470971
Option 4 ID : 264330470972
Status : Not Answered
Chosen Option : --

Q.19 Who became the first Indian woman to win two Olympic medals?

- Ans 1. Karnam Malleswari
 2. PV Sindhu
 3. Saina Nehwal
 4. Mary Kom

Question ID : 264330119262
Option 1 ID : 264330467338
Option 2 ID : 264330467336
Option 3 ID : 264330467335
Option 4 ID : 264330467337
Status : Answered
Chosen Option : 2

Q.20 The three-second rule is applicable for the game of _____.

- Ans 1. kho-kho
 2. badminton
 3. basketball
 4. kabaddi

Question ID : 264330110390
Option 1 ID : 264330433838
Option 2 ID : 264330433840
Option 3 ID : 264330433839
Option 4 ID : 264330433837
Status : Answered
Chosen Option : 1

Q.21 Which of the following is a merit of the parliamentary system?

- Ans 1. Autocracy
 2. Narrow representation
 3. Non responsible government
 4. Harmony between legislature and executive

Question ID : 264330177768
Option 1 ID : 264330697182
Option 2 ID : 264330697181
Option 3 ID : 264330697179
Option 4 ID : 264330697180
Status : Answered
Chosen Option : 4

Q.22 'Godaan', a famous novel, was authored by _____.

- Ans 1. Jaishankar Prasad
 2. Harivansh Rai Bachchan
 3. Suryakant Tripathi Nirala
 4. Munshi Premchand

Question ID : 26433064230
Option 1 ID : 264330251512
Option 2 ID : 264330251515
Option 3 ID : 264330251514
Option 4 ID : 264330251513
Status : Answered
Chosen Option : 4

Q.23 Expenditure incurred by residents during their foreign tour will be added to which component while calculating national income?

- Ans
- 1. Government final consumption expenditure
 - 2. Private final consumption expenditure
 - 3. Gross foreign capital formation
 - 4. Gross domestic capital formation

Question ID : 264330116514
Option 1 ID : 264330458141
Option 2 ID : 264330458143
Option 3 ID : 264330458144
Option 4 ID : 264330458142
Status : Answered
Chosen Option : 2

Q.24 FIH Asia Cup Men's Hockey 2022 was hosted by:

- Ans
- 1. Japan
 - 2. Pakistan
 - 3. Indonesia
 - 4. India

Question ID : 264330118896
Option 1 ID : 264330466242
Option 2 ID : 264330466241
Option 3 ID : 264330466240
Option 4 ID : 264330466239
Status : Answered
Chosen Option : 4

Q.25 Who was India's 12th Prime Minister?

- Ans
- 1. Inder Kumar Gujral
 - 2. Atal Bihari Vajpayee
 - 3. PV Narasimha Rao
 - 4. Manmohan Singh

Question ID : 264330110817
Option 1 ID : 264330435545
Option 2 ID : 264330435546
Option 3 ID : 264330435547
Option 4 ID : 264330435548
Status : Answered
Chosen Option : 1

Q.26 Name the Indian social reformer who played a crucial role in the passing of the Age of Consent Bill, 1891.

- Ans
- 1. Rabindranath Tagore
 - 2. C. Subramania Bharathi
 - 3. Behramji Malabari
 - 4. Ishwarchandra Vidyasagar

Question ID : 264330114115
Option 1 ID : 264330448546
Option 2 ID : 264330448548
Option 3 ID : 264330448547
Option 4 ID : 264330448545
Status : Not Answered
Chosen Option : --

Q.27 'Why I am an Atheist' is an autobiography of whom among the following Revolutionaries?

- Ans
- 1. Chandrashekhar Azad
 - 2. Suryakant Sen
 - 3. Ramprasad Bismil
 - 4. Bhagat Singh

Question ID : 26433064212
Option 1 ID : 264330251440
Option 2 ID : 264330251441
Option 3 ID : 264330251443
Option 4 ID : 264330251442
Status : Answered
Chosen Option : 4

Q.28 Who among the following was the captain of the Indian cricket team in the 1983 World Cup?

- Ans
- 1. Kapil Dev
 - 2. Mohinder Amarnath
 - 3. Dilip Vengsarkar
 - 4. Sunil Gavaskar

Question ID : 264330176921
Option 1 ID : 264330693880
Option 2 ID : 264330693882
Option 3 ID : 264330693879
Option 4 ID : 264330693881
Status : Answered
Chosen Option : 1

Q.29 Identify the artist who is NOT related to the musical instrument pakhwaj.

- Ans
- 1. Pandit Kishan Maharaj
 - 2. Ayodhya Prasad
 - 3. Gopal Das
 - 4. Totaram Sharma

Question ID : 264330111193
Option 1 ID : 264330436860
Option 2 ID : 264330436858
Option 3 ID : 264330436859
Option 4 ID : 264330436857
Status : Answered
Chosen Option : 1

Q.30 Which of the following temples is located in Uttarakhand?

- Ans
- 1. Neelkanth Mahadev
 - 2. Ranakpur
 - 3. Gomateshwara
 - 4. Kamakhya

Question ID : 264330111850
Option 1 ID : 264330439486
Option 2 ID : 264330439487
Option 3 ID : 264330439488
Option 4 ID : 264330439485
Status : Answered
Chosen Option : 1

Q.31 Sonal Mansingh is an eminent Indian classical dancer and a leading exponent of Bharatanatyam, Kuchipudi, Odissi and _____ .

- Ans
- 1. Satriya
 - 2. Kathakali
 - 3. Chhau
 - 4. Kathak

Question ID : 264330106198
Option 1 ID : 264330417096
Option 2 ID : 264330417095
Option 3 ID : 264330417094
Option 4 ID : 264330417093
Status : Answered
Chosen Option : 2

Q.32 By which name was the Head of the Panchayat or the Village Headman called in Mughal India?

- Ans
- 1. Samant
 - 2. Mahant
 - 3. Muqaddam
 - 4. Khoran

Question ID : 264330118989
Option 1 ID : 264330466613
Option 2 ID : 264330466614
Option 3 ID : 264330466612
Option 4 ID : 264330466611
Status : Answered
Chosen Option : 1

Q.33 Sodium hydrogen carbonate is called:

- Ans
- 1. Washing soda
 - 2. Baking soda
 - 3. Gypsum
 - 4. Plaster of Paris

Question ID : 264330177337
Option 1 ID : 264330695539
Option 2 ID : 264330695540
Option 3 ID : 264330695542
Option 4 ID : 264330695541
Status : Answered
Chosen Option : 1

Q.34 According to the Ministry of Commerce and Industry 2021-22, which of the following is the largest exported agricultural product from India?

- Ans
- 1. Rice
 - 2. Maize
 - 3. Spices
 - 4. Wheat

Question ID : 264330138066
Option 1 ID : 264330540873
Option 2 ID : 264330540871
Option 3 ID : 264330540874
Option 4 ID : 264330540872
Status : Answered
Chosen Option : 1

Q.35 Milk is good source of:

- Ans
- 1. phosphorous, iron, and protein
 - 2. calcium, magnesium, and fibre
 - 3. calcium, iron, and fibre
 - 4. calcium, phosphorous, and protein

Question ID : 264330120970
Option 1 ID : 264330474097
Option 2 ID : 264330474098
Option 3 ID : 264330474096
Option 4 ID : 264330474095
Status : Answered
Chosen Option : 3

Q.36 Which of the following Ministries introduced the Venture Capital Assistance Scheme?

- Ans
- 1. Ministry of Science and Technology
 - 2. Ministry of Micro, Small and Medium Enterprises
 - 3. Ministry of Agriculture and Farmers Welfare
 - 4. Ministry of Finance

Question ID : 264330116547
Option 1 ID : 264330458275
Option 2 ID : 264330458276
Option 3 ID : 264330458273
Option 4 ID : 264330458274
Status : Not Answered
Chosen Option : --

Q.37 Which form of art is celebrated at the Mando festival of Goa?

- Ans
- 1. Painting
 - 2. Literature
 - 3. Sports
 - 4. Music

Question ID : 264330132421
Option 1 ID : 264330518781
Option 2 ID : 264330518782
Option 3 ID : 264330518780
Option 4 ID : 264330518779
Status : Answered
Chosen Option : 4

Q.38 Economic reform measures in India were formally introduced in _____.

- Ans
- 1. 1990
 - 2. 1991
 - 3. 1980
 - 4. 1947

Question ID : 264330110021
Option 1 ID : 264330432364
Option 2 ID : 264330432361
Option 3 ID : 264330432363
Option 4 ID : 264330432362
Status : Answered
Chosen Option : 2

Q.39 Which of the following statements is correct about India for the period between 1950 and 1990?

- Ans**
- 1. The proportion of GDP contributed by agriculture and population engaged in the sector declined significantly.
 - 2. The proportion of GDP contributed by agriculture declined significantly but not the population engaged in the sector.
 - 3. Being an agricultural economy, the contribution of agricultural sector is not considerable for Indian economy
 - 4. The proportion of GDP contributed by agriculture increased significantly but not the population engaged in the sector.

Question ID : 264330120896

Option 1 ID : 264330473801

Option 2 ID : 264330473800

Option 3 ID : 264330473802

Option 4 ID : 264330473799

Status : Answered

Chosen Option : 2

Q.40 Which of the following Constitutional Amendment Acts added Fundamental Duties in the Indian Constitution?

- Ans**
- 1. 65th
 - 2. 74th
 - 3. 73rd
 - 4. 42nd

Question ID : 264330173482

Option 1 ID : 264330680408

Option 2 ID : 264330680410

Option 3 ID : 264330680409

Option 4 ID : 264330680407

Status : Answered

Chosen Option : 4

Q.41 According to the Census of India 2011, which group of states recorded the lowest male literacy rate?

- Ans**
- 1. Bihar and Arunachal Pradesh
 - 2. Rajasthan and Arunachal Pradesh
 - 3. Bihar and Rajasthan
 - 4. Arunachal Pradesh and Odisha

Question ID : 264330179512

Option 1 ID : 264330704050

Option 2 ID : 264330704048

Option 3 ID : 264330704047

Option 4 ID : 264330704049

Status : Answered

Chosen Option : 3

Q.42 The first chairman of the Planning Commission in India was _____.

- Ans
- 1. Jaiprakash Narayan
 - 2. Sriman Narayan
 - 3. Jawaharlal Nehru
 - 4. Radha Mohan Singh

Question ID : 264330109991
Option 1 ID : 264330432243
Option 2 ID : 264330432242
Option 3 ID : 264330432241
Option 4 ID : 264330432244
Status : Answered
Chosen Option : 3

Q.43 The Ghode Modni dance, to celebrate the victory of warriors, is performed in which of the following states of India?

- Ans
- 1. Goa
 - 2. West Bengal
 - 3. Karnataka
 - 4. Tamil Nadu

Question ID : 264330110427
Option 1 ID : 264330433986
Option 2 ID : 264330433988
Option 3 ID : 264330433985
Option 4 ID : 264330433987
Status : Not Answered
Chosen Option : --

Q.44 The Charminar was constructed by which of the following dynasties?

- Ans
- 1. Pandya
 - 2. Chera
 - 3. Chalukya
 - 4. Qutb Shahi

Question ID : 264330111851
Option 1 ID : 264330439491
Option 2 ID : 264330439490
Option 3 ID : 264330439492
Option 4 ID : 264330439489
Status : Answered
Chosen Option : 4

Q.45 Net investment can be best expressed using which of the following elements?

- Ans
- 1. Net investment-Depreciation
 - 2. Depletion Value
 - 3. Replacement Cost
 - 4. Gross Investment-Depreciation

Question ID : 264330130661
Option 1 ID : 264330511756
Option 2 ID : 264330511758
Option 3 ID : 264330511757
Option 4 ID : 264330511755
Status : Answered
Chosen Option : 4

Q.46 What is the chemical formula of sodium nitrate?

- Ans
- 1. NaNH_3
 - 2. NaNO_4
 - 3. NaNO_3
 - 4. NaNO_2

Question ID : 264330173646
Option 1 ID : 264330681063
Option 2 ID : 264330681066
Option 3 ID : 264330681065
Option 4 ID : 264330681064
Status : Answered
Chosen Option : 3

Q.47 Geeta Mahalik won the Sangeet Natak Akademi Award for which form of dance?

- Ans
- 1. Odissi
 - 2. Kathakali
 - 3. Bharatanatyam
 - 4. Kuchipudi

Question ID : 26433074883
Option 1 ID : 264330293623
Option 2 ID : 264330293622
Option 3 ID : 264330293621
Option 4 ID : 264330293620
Status : Not Answered
Chosen Option : --

Q.48 'Mahatma Gandhi National Fellowship' ('MGNF') is a two-year academic programme that was launched by _____ in 2020 as part of the SANKALP programme.

- Ans
- 1. IIT Madras
 - 2. IIM Ahmedabad
 - 3. IIT Delhi
 - 4. IIM Bangalore

Question ID : 264330111593
Option 1 ID : 264330438459
Option 2 ID : 264330438458
Option 3 ID : 264330438460
Option 4 ID : 264330438457
Status : Not Answered
Chosen Option : --

Q.49 Who among the following was one of the court poets of the King Samudragupta?

- Ans
- 1. Harisena
 - 2. Surdas
 - 3. Pragyajan
 - 4. Hariharan

Question ID : 264330118957
Option 1 ID : 264330466485
Option 2 ID : 264330466483
Option 3 ID : 264330466486
Option 4 ID : 264330466484
Status : Answered
Chosen Option : 1

Q.50 Which of the following Articles provides the minorities the right to establish and administer educational institutions of their choice?

- Ans
- 1. Article 31
 - 2. Article 30
 - 3. Article 29
 - 4. Article 28

Question ID : 264330120099
Option 1 ID : 264330470654
Option 2 ID : 264330470653
Option 3 ID : 264330470652
Option 4 ID : 264330470651
Status : Answered
Chosen Option : 4

Section : Reasoning

Q.1 Two statements are given followed by two conclusions numbered I and II. Assuming the statements to be true, even if they seem to be at variance with commonly known facts, decide which of the conclusions logically follow(s) from the statements.

Statements:

All hens are dogs.

All dogs are peacocks.

Conclusions:

I. All hens are peacocks.

II. All peacocks are dogs.

- Ans
- 1. Only conclusion II follows
 - 2. Only conclusion I follows
 - 3. Neither conclusion I nor II follows
 - 4. Both conclusions I and II follow

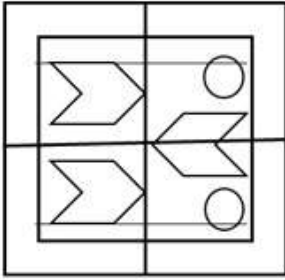
Question ID : 26433045342
Option 1 ID : 264330177804
Option 2 ID : 264330177803
Option 3 ID : 264330177806
Option 4 ID : 264330177805
Status : Answered
Chosen Option : 2

Q.2 In a code language, if PETROL is coded as ODSQNK and ENGINE is coded as DMFHMD, then how will VEHICLE be coded?

- Ans
- 1. UDGHBKD
 - 2. UDHGKBD
 - 3. WFIJDMF
 - 4. WDIHDKF

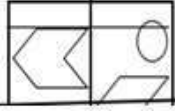
Question ID : 26433089488
Option 1 ID : 264330351454
Option 2 ID : 264330351456
Option 3 ID : 264330351453
Option 4 ID : 264330351455
Status : Answered
Chosen Option : 1

Q.3 Select the option figure which is embedded in the given figure as its part (rotation is NOT allowed).

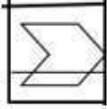


Ans

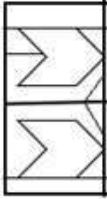
✗ 1.



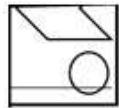
✗ 2.



✗ 3.



✓ 4.



Question ID : 264330116994

Option 1 ID : 264330460060

Option 2 ID : 264330460057

Option 3 ID : 264330460058

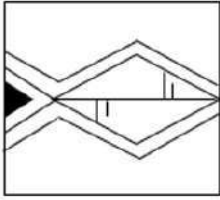
Option 4 ID : 264330460059

Status : Answered

Chosen Option : 4

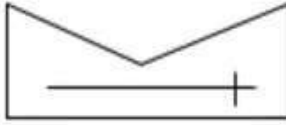
Adda247

Q.4 Select the option figure which is embedded in the given figure. (Rotation is NOT allowed).

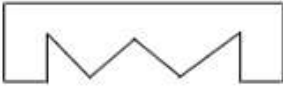


Ans

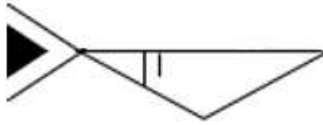
✗ 1.



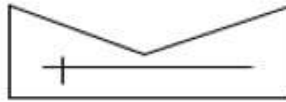
✗ 2.



✓ 3.



✗ 4.



Question ID : 2643308532

Option 1 ID : 264330335832

Option 2 ID : 264330335830

Option 3 ID : 264330335829

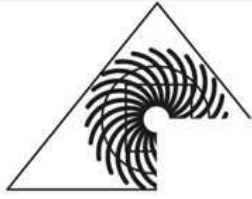
Option 4 ID : 264330335831

Status : Answered

Chosen Option : 3

Adda247

Q.5 Which of the following option figures will complete the pattern in the figure given below?



Ans

1.



2.



3.



4.



Question ID : 26433080625

Option 1 ID : 264330316436

Option 2 ID : 264330316434

Option 3 ID : 264330316433

Option 4 ID : 264330316435

Status : Answered

Chosen Option : 2

Adda247

Q.6 Which figure should replace the question mark (?) if the series were to be continued?

6	□	2	6	□	☆	8	□	
L		8	6		P			?
2	☆	☆	□	8	2	2	☆	

Ans

1.

2	8
3	
☆	□
2.

☆	2
8	
□	P
3.

☆	2
	□
P	8
4.

☆	2
P	
□	8

Question ID : 264330130792

Option 1 ID : 264330512280

Option 2 ID : 264330512279

Option 3 ID : 264330512282

Option 4 ID : 264330512281

Status : Not Answered

Chosen Option : --

Q.7 Which two signs should be interchanged to make the given equation correct?

$$98 - 49 \div 7 + 74 \times 55 = 3$$

- Ans
1. = and +
2. = and +
3. = and ×
4. = and -

Question ID : 26433085739

Option 1 ID : 264330336659

Option 2 ID : 264330336657

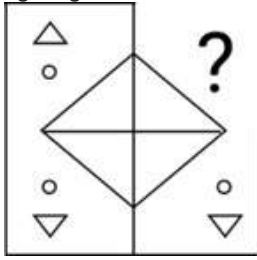
Option 3 ID : 264330336658

Option 4 ID : 264330336660

Status : Answered

Chosen Option : 3

Q.8 Select the figure from the given options that will replace the question mark (?) in the figure given below and complete the pattern.



Ans

- ✓ 1.
- ✗ 2.
- ✗ 3.
- ✗ 4.

Question ID : 264330111706
 Option 1 ID : 264330438909
 Option 2 ID : 264330438910
 Option 3 ID : 264330438912
 Option 4 ID : 264330438911
 Status : Answered
 Chosen Option : 1

Q.9 Select the correct mirror image of the given combination when the mirror is placed at MN as shown below.

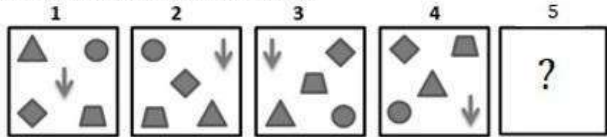


Ans

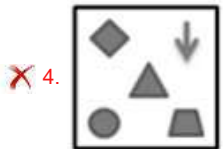
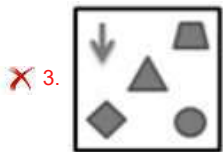
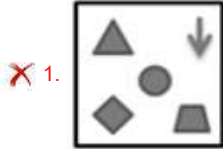
- ✗ 1. W 4 7 N h t 2
- ✗ 2. 2 t h N 4 7 w
- ✗ 3. 2 t 4 N 4 7 t 2
- ✓ 4. w 7 4 N h t 2

Question ID : 264330117004
 Option 1 ID : 264330460099
 Option 2 ID : 264330460097
 Option 3 ID : 264330460098
 Option 4 ID : 264330460100
 Status : Answered
 Chosen Option : 4

Q.10 Each of the following questions consists of 4 figures marked 1, 2, 3 and 4 called the Problem Figures followed by 4 other figures. Select a figure from amongst the Answer Figures which will continue the same series as established by the four Problem Figures.




Ans



Question ID : 264330110536
 Option 1 ID : 264330434421
 Option 2 ID : 264330434424
 Option 3 ID : 264330434423
 Option 4 ID : 264330434422

Status : Answered

Chosen Option : 2



Q.11 Which of the following option figures will complete the pattern in the figure given below?



Ans



Question ID : 26433089619

Option 1 ID : 264330351978

Option 2 ID : 264330351977

Option 3 ID : 264330351980

Option 4 ID : 264330351979

Status : Answered

Chosen Option : 4

Q.12 Select the option that is related to the fifth letter-cluster in the same way as the second letter-cluster is related to the first letter-cluster and the fourth letter-cluster is related to the third letter-cluster.

KEEP : SHHN :: HIDE : HGLK :: EXIT : ?

- Ans
- ✗ 1. XLAH
 - ✗ 2. WMBH
 - ✓ 3. WLAH
 - ✗ 4. WLAI

Question ID : 26433076453

Option 1 ID : 264330299878

Option 2 ID : 264330299877

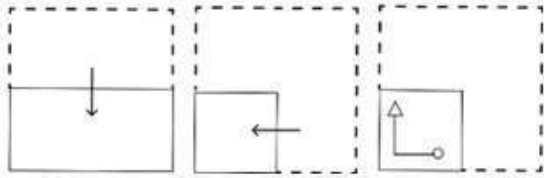
Option 3 ID : 264330299879

Option 4 ID : 264330299876

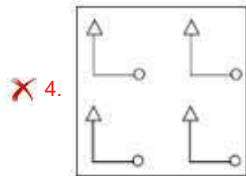
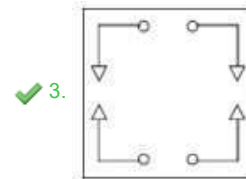
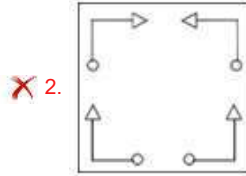
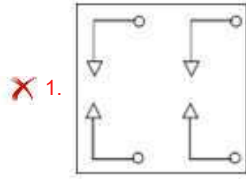
Status : Answered

Chosen Option : 3

Q.13 A paper is folded and cut as shown below. How will it appear when unfolded?



Ans



Question ID : 264330114714

Option 1 ID : 264330450944

Option 2 ID : 264330450942

Option 3 ID : 264330450941

Option 4 ID : 264330450943

Status : Answered

Chosen Option : 3

Q.14 Select the set in which the numbers are NOT related in the same way as are the numbers of the following sets.

(59, 236, 175), (24, 124, 98)

(NOTE: Operations should be performed on the whole numbers, without breaking down the numbers into its constituent digits.)

Ans ✗ 1. (22, 183, 159)

✓ 2. (21, 124, 108)

✗ 3. (64, 182, 116)

✗ 4. (16, 206, 188)

Question ID : 26433097244

Option 1 ID : 264330381675

Option 2 ID : 264330381673

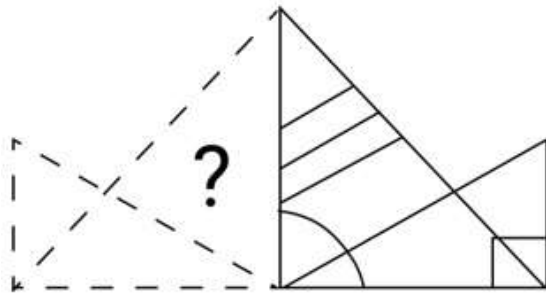
Option 3 ID : 264330381676

Option 4 ID : 264330381674

Status : Answered

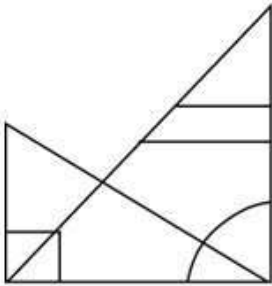
Chosen Option : 4

Q.15 Select the figure from the options that can replace the question mark (?) and complete the given pattern.

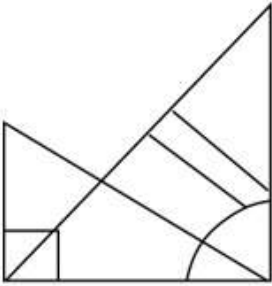


Ans

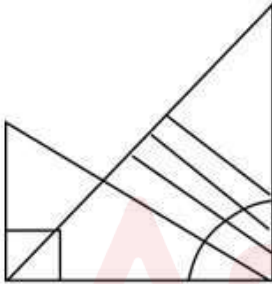
✗ 1.



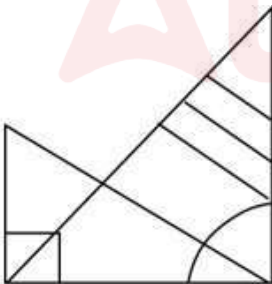
✗ 2.



✗ 3.



✓ 4.



Question ID : 264330106481

Option 1 ID : 264330418225

Option 2 ID : 264330418227

Option 3 ID : 264330418228

Option 4 ID : 264330418226

Status : Answered

Chosen Option : 4

Q.16 Select the correct mirror image of the given figure when the mirror is placed at MN as shown below.



- Ans
- 1. X45θ2TAU
 - 2. X4ζθ2TAN
 - 3. X4ζθ2TAU
 - 4. X4ζθ2TAU

Question ID : 264330126676

Option 1 ID : 264330496377

Option 2 ID : 264330496376

Option 3 ID : 264330496379

Option 4 ID : 264330496378

Status : Answered

Chosen Option : 3

Q.17 Select the correct combination of mathematical signs to sequentially replace the * signs and to balance the given equation.
 $11 * 12 * 70 * 175 * 5 * 97$

- Ans
- 1. ×, +, -, +, =
 - 2. ×, -, +, +, =
 - 3. +, ×, -, +, =
 - 4. ×, -, +, =, +

Question ID : 26433076551

Option 1 ID : 264330300269

Option 2 ID : 264330300268

Option 3 ID : 264330300270

Option 4 ID : 264330300271

Status : Answered

Chosen Option : 2

Q.18 C, D, E, F, G and H were six women, sitting around a circular table, equidistant from each other, facing the centre. D and E were sitting immediately next to each other. F and H were sitting immediately next to each other. G was to the immediate right of C. E was to the immediate right of F. D was to the immediate left of C. Who among the following was sitting third to the left of D?

- Ans
- 1. F
 - 2. G
 - 3. C
 - 4. H

Question ID : 26433087010
Option 1 ID : 264330341681
Option 2 ID : 264330341683
Option 3 ID : 264330341684
Option 4 ID : 264330341682
Status : Answered
Chosen Option : 4

Q.19 Which of the following options will replace the question mark (?) in the given series?
13, 104, 52, 416, 208, ?, 832

- Ans
- 1. 1664
 - 2. 1158
 - 3. 790
 - 4. 690

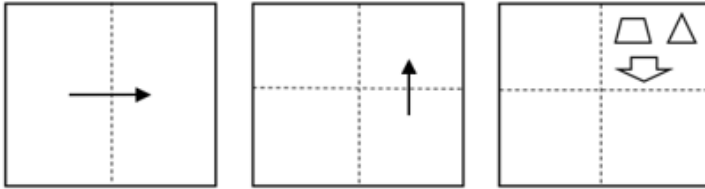
Question ID : 264330109435
Option 1 ID : 264330430020
Option 2 ID : 264330430018
Option 3 ID : 264330430019
Option 4 ID : 264330430017
Status : Answered
Chosen Option : 1

Q.20 Which of the following letter clusters will replace the question mark (?) in the given series to make it logically complete?
RTE, PVC, NXA, LZY, ?

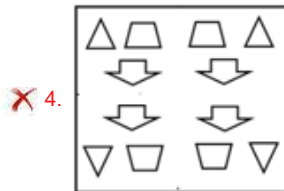
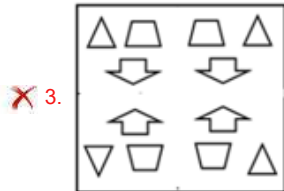
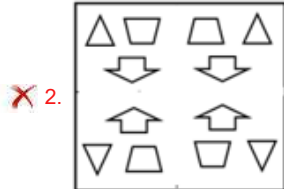
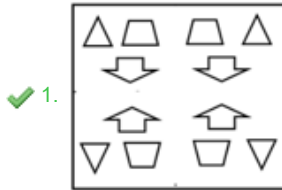
- Ans
- 1. JBW
 - 2. JBX
 - 3. KXV
 - 4. JBA

Question ID : 264330102230
Option 1 ID : 264330401385
Option 2 ID : 264330401387
Option 3 ID : 264330401388
Option 4 ID : 264330401386
Status : Answered
Chosen Option : 1

Q.21 A paper is folded and cut as shown below. How will it appear when unfolded?



Ans



Question ID : 264330113647

Option 1 ID : 264330446674

Option 2 ID : 264330446676

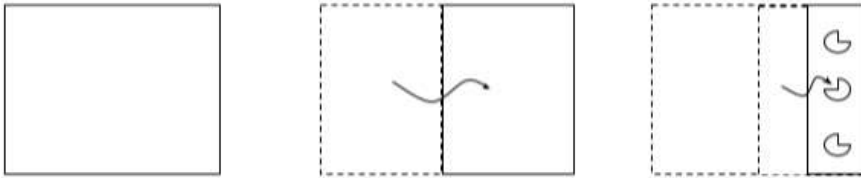
Option 3 ID : 264330446675

Option 4 ID : 264330446673

Status : Answered


Chosen Option : 1

Q.22 A paper is folded and cut as shown below. How will it appear when unfolded?




Ans

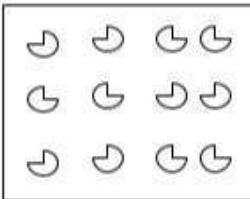
✓ 1.




✗ 2.



✗ 3.



✗ 4.



Question ID : 264330118716

Option 1 ID : 264330466117

Option 2 ID : 264330466116

Option 3 ID : 264330466118

Option 4 ID : 264330466115

Status : Answered

Chosen Option : 1

Q.23 Select the option that is related to the fourth term in the same way as the first term is related to the second term and the fifth term is related to the sixth term.

8 : 199 :: ? : 439 :: 5 : 82

Ans ✗ 1. 16

✗ 2. 14

✓ 3. 12

✗ 4. 10

Question ID : 26433059943

Option 1 ID : 264330234607

Option 2 ID : 264330234606

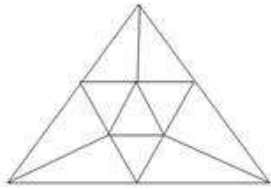
Option 3 ID : 264330234605

Option 4 ID : 264330234604

Status : Not Answered

Chosen Option : --

Q.24 How many triangles are there in the following figure?



- Ans
- 1. 18
 - 2. 12
 - 3. 15
 - 4. 10

Question ID : 26433076732
 Option 1 ID : 264330300995
 Option 2 ID : 264330300993
 Option 3 ID : 264330300994
 Option 4 ID : 264330300992
 Status : Answered
 Chosen Option : 3

Q.25 Which figure should replace the question mark (?) if the series were to be continued?

Z	L	T	3	L	T	3	O	
	O		Z		P		L	?
3		T	L	O	O	3	T	P

Ans

- 1.

P	T
	O
L	3
- 2.

O	P
	☆
3	T
- 3.

T	3
	☆
P	O
- 4.

O	P
	L
3	T

Question ID : 264330130812
 Option 1 ID : 264330512360
 Option 2 ID : 264330512361
 Option 3 ID : 264330512359
 Option 4 ID : 264330512362
 Status : Not Answered
 Chosen Option : --

Q.1 A hemispherical bowl is made of steel whose thickness is 2 cm. The inside radius of the bowl is 3 cm. Find the volume (in cm^3) of the steel used in making the bowl. (Rounded off to 2 decimal places)

(Take $\pi = \frac{22}{7}$)

- Ans**
- 1. 245.14
 - 2. 280.75
 - 3. 211.25
 - 4. 205.33

Question ID : 264330112432
Option 1 ID : 264330441815
Option 2 ID : 264330441813
Option 3 ID : 264330441816
Option 4 ID : 264330441814
Status : Answered
Chosen Option : 4

Q.2 What is the difference (in ₹) between the compound interest, when interest is compounded 6-monthly, and the simple interest on a sum of ₹10,000 for $1\frac{1}{2}$ years at 10% p.a.?

- Ans**
- 1. 75.26
 - 2. 76.25
 - 3. 71.65
 - 4. 72.65

Question ID : 264330103676
Option 1 ID : 264330407012
Option 2 ID : 264330407011
Option 3 ID : 264330407009
Option 4 ID : 264330407010
Status : Answered
Chosen Option : 2

Q.3 The smallest 4-digit prime number is:

- Ans**
- 1. 1009
 - 2. 1007
 - 3. 1003
 - 4. 1001

Question ID : 264330104479
Option 1 ID : 264330410219
Option 2 ID : 264330410220
Option 3 ID : 264330410218
Option 4 ID : 264330410217
Status : Answered
Chosen Option : 3

Q.4 14 men can complete a piece of work in 6 days, while 20 women can complete the same work in 8 days. 7 men started working on the job, and after working for 3 days all of them stopped working. How many women should be put on the job to complete the remaining work, if it is to be completed in 6 days?

- Ans 1. 20
 2. 25
 3. 15
 4. 30

Question ID : 264330103745
Option 1 ID : 264330407286
Option 2 ID : 264330407287
Option 3 ID : 264330407285
Option 4 ID : 264330407288
Status : Answered
Chosen Option : 1

Q.5 What is the greatest possible length (in cm) of scale to measure exactly the following lengths : 1 m, 20 cm, 3 m, 90 cm?

- Ans 1. 30
 2. 10
 3. 45
 4. 50

Question ID : 264330119496
Option 1 ID : 264330468267
Option 2 ID : 264330468269
Option 3 ID : 264330468268
Option 4 ID : 264330468270
Status : Answered
Chosen Option : 2

Q.6 By selling an article, a shopkeeper makes a profit of 30% of its selling price. Find his profit percentage.

- Ans 1. 40%
 2. $46\frac{1}{3}\%$
 3. $42\frac{6}{7}\%$
 4. 44%

Question ID : 264330111461
Option 1 ID : 264330437929
Option 2 ID : 264330437932
Option 3 ID : 264330437930
Option 4 ID : 264330437931
Status : Answered
Chosen Option : 3

Q.7 Find the total percentage change in the volume of a cuboid if its length and breadth are decreased by 10% and 20%, respectively, while its height is increased by 30%.

- Ans** 1. 6.4%
 2. 8.2%
 3. 9.1%
 4. 8.6%

Question ID : 264330103698
Option 1 ID : 264330407097
Option 2 ID : 264330407098
Option 3 ID : 264330407099
Option 4 ID : 264330407100
Status : Answered
Chosen Option : 1

Q.8 Trader A offers a discount of 25% on the marked price for cash purchase. Trader B offers a trade discount of 20% and a cash discount of 4% on the same article marked at the same price as that of Trader A. If the discount given by Trader A is ₹360 more than the discount given by Trader B, then what is the marked price of the item (in rupees)?

- Ans** 1. 19,000
 2. 18,000
 3. 30,000
 4. 20,000

Question ID : 264330131351
Option 1 ID : 264330514518
Option 2 ID : 264330514516
Option 3 ID : 264330514515
Option 4 ID : 264330514517
Status : Answered
Chosen Option : 4

Q.9 If the average of 8, 6, 14, 7 and x is 11, then the value of x is:

- Ans** 1. 18
 2. 20
 3. 22
 4. 15

Question ID : 264330118197
Option 1 ID : 264330464604
Option 2 ID : 264330464605
Option 3 ID : 264330464606
Option 4 ID : 264330464603
Status : Answered
Chosen Option : 2

Q.10 A policeman chases a thief. The speed of the policeman and thief is 8 km/h and 7 km/h, respectively. If the policeman started 6 minutes late, after running how much distance will he be able to catch the thief?

- Ans
- 1. 5.5 km
 - 2. 5.6 km
 - 3. 6 km
 - 4. 6.3 km

Question ID : 264330183832
Option 1 ID : 264330721004
Option 2 ID : 264330721005
Option 3 ID : 264330721006
Option 4 ID : 264330721007
Status : Answered
Chosen Option : 2

Q.11 Simplify $1.6 + 1.2 \times \frac{1}{4} - \left\{ \frac{1}{5} + (1 - 0.8) \right\}$.

- Ans
- 1. 1.5
 - 2. 1.4
 - 3. 1.6
 - 4. 1.8

Question ID : 264330104216
Option 1 ID : 264330409167
Option 2 ID : 264330409168
Option 3 ID : 264330409168
Option 4 ID : 264330409165
Status : Answered
Chosen Option : 3

Q.12 A person took a loan of ₹1,200 on simple interest for as many years as the rate of interest. If he paid ₹432 as interest at the end of the loan period, what was the rate of interest per annum?

- Ans
- 1. 9%
 - 2. 8%
 - 3. 5%
 - 4. 6%

Question ID : 264330119420
Option 1 ID : 264330467967
Option 2 ID : 264330467969
Option 3 ID : 264330467968
Option 4 ID : 264330467970
Status : Answered
Chosen Option : 4

Q.13 एक सभा में 350 स्काउट्स को दूध परोसा गया। उनमें से प्रत्येक को 10 cm आधार त्रिज्या और 15 cm ऊँचाई वाले बेलनाकार गिलास में दूध दिया गया। यदि दाता ने ₹50 प्रति लीटर की दर से दूध खरीदा, तो कितनी राशि खर्च की गई? (बेलनाकार कागज के गिलास आदि की कीमत पर ध्यान न दें)

- Ans
- 1. ₹80,000
 - 2. ₹82,500
 - 3. ₹81,000
 - 4. ₹83,000

Question ID : 26433090273
Option 1 ID : 264330354569
Option 2 ID : 264330354571
Option 3 ID : 264330354570
Option 4 ID : 264330354572
Status : Answered
Chosen Option : 2

Q.14 Ajay's test marks in two subjects, Mathematics and Science, are in the ratio 9 : 13. If he got 16 marks more in Science than in Mathematics, what are his marks in Mathematics?

- Ans
- 1. 27
 - 2. 36
 - 3. 54
 - 4. 45

Question ID : 264330129425
Option 1 ID : 264330507068
Option 2 ID : 264330507067
Option 3 ID : 264330507069
Option 4 ID : 264330507066
Status : Answered
Chosen Option : 2

Q.15 A man loses 25% of his money. After spending 60% of the remaining money, he has ₹360 left. What is the amount of money (in ₹) he originally had?

- Ans
- 1. 1200
 - 2. 1962
 - 3. 654
 - 4. 2400

Question ID : 264330104238
Option 1 ID : 264330409254
Option 2 ID : 264330409253
Option 3 ID : 264330409255
Option 4 ID : 264330409256
Status : Answered
Chosen Option : 1

Q.1 Which of the following is an address on the world wide web that is used to access specific web resources and is the specific path to a resource?

- Ans
- 1. Hyperlink
 - 2. Web server
 - 3. Web pages
 - 4. Uniform resource locator

Question ID : 264330180809
Option 1 ID : 264330709199
Option 2 ID : 264330709202
Option 3 ID : 264330709201
Option 4 ID : 264330709200
Status : Answered
Chosen Option : 4

Q.2 The keyboard shortcut for opening a new document in Microsoft Word 365, while another document is already open, is _____.

- Ans
- 1. Ctrl + N
 - 2. Ctrl + Y
 - 3. Ctrl + S
 - 4. Ctrl + P

Question ID : 264330182072
Option 1 ID : 264330714128
Option 2 ID : 264330714130
Option 3 ID : 264330714127
Option 4 ID : 264330714129
Status : Answered
Chosen Option : 1

Q.3 Which of the following is NOT used to edit text in MS-Word 365?

- Ans
- 1. Making text as Bold/Italic
 - 2. Changing Font Color
 - 3. Making text as Left align
 - 4. Changing Font Style

Question ID : 264330178285
Option 1 ID : 264330699197
Option 2 ID : 264330699196
Option 3 ID : 264330699198
Option 4 ID : 264330699195
Status : Answered
Chosen Option : 3

Q.4 Which of the following tabs in MS Word 365, allows you to customise the page size in the Page Setup dialog box?

- Ans
- 1. Layout
 - 2. File
 - 3. Edit
 - 4. Insert

Question ID : 264330180429
Option 1 ID : 264330707685
Option 2 ID : 264330707684
Option 3 ID : 264330707683
Option 4 ID : 264330707686
Status : Answered
Chosen Option : 4

Q.5 While composing an email, what does the user have to write in the 'Subject' field?

- Ans
- 1. A smiley or emoji to make the email more interesting
 - 2. The recipient's email address
 - 3. The main topic of an email message
 - 4. The sender's email address

Question ID : 264330182094
Option 1 ID : 264330714218
Option 2 ID : 264330714215
Option 3 ID : 264330714216
Option 4 ID : 264330714217
Status : Answered
Chosen Option : 3

Q.6 Which of the following document settings can be changed from the layout tab of MS word 365?

- Ans
- 1. Change styles
 - 2. Margins
 - 3. Macros
 - 4. Spelling grammar

Question ID : 264330175982
Option 1 ID : 264330690226
Option 2 ID : 264330690223
Option 3 ID : 264330690224
Option 4 ID : 264330690225
Status : Answered
Chosen Option : 3

Q.7 Which Microsoft Excel 365, function is used to join or concatenate text strings from different cells?

- Ans
- 1. CONCATENATE
 - 2. MERGE
 - 3. ADD
 - 4. JOIN

Question ID : 264330180692
Option 1 ID : 264330708735
Option 2 ID : 264330708737
Option 3 ID : 264330708736
Option 4 ID : 264330708738
Status : Answered
Chosen Option : 2

Q.8 Which of the following statements about autofitting the row height in MS Excel 365 is correct?

- Ans**
- 1. Single-clicking on the boundary between row headers will automatically adjust the row height to fit the content.
 - 2. Double-clicking on the boundary between row headers will automatically adjust the row height to fit the content.
 - 3. Double-clicking on the boundary between column headers will automatically adjust the column height to fit the content.
 - 4. Single-clicking on the boundary between column headers will automatically adjust the column height to fit the content.

Question ID : 264330180824

Option 1 ID : 264330709262

Option 2 ID : 264330709259

Option 3 ID : 264330709261

Option 4 ID : 264330709260

Status : Not Answered

Chosen Option : --

Q.9 In MS Excel 365, Which function from the following list is used to tally the quantity of empty cells within a specified cell range?

- Ans**
- 1. COUNTB()
 - 2. COUNTA()
 - 3. COUNT()
 - 4. COUNTBLANK()

Question ID : 264330179437

Option 1 ID : 264330703754

Option 2 ID : 264330703752

Option 3 ID : 264330703751

Option 4 ID : 264330703753

Status : Answered

Chosen Option : 2

Q.10 Which of the following is used to print the document in MS-Word 365?

- Ans**
- 1. File->print
 - 2. Design->print
 - 3. Home->print
 - 4. View->print

Question ID : 264330178279

Option 1 ID : 264330699171

Option 2 ID : 264330699173

Option 3 ID : 264330699172

Option 4 ID : 264330699174

Status : Answered

Chosen Option : 3

Constable Executive Male and Female in Delhi Police Examination 2023

Roll Number	
Candidate Name	
Venue Name	R K Digital Computer Centre 1
Exam Date	15/11/2023
Exam Time	3:00 PM - 4:30 PM
Subject	Constable Executive Male and Female in Delhi Police Examination 2023

Section : General Knowledge

Q.1 सरकार ने नवाचार के लिए सक्षम बुनियादी ढांचा और सुगमकारी माहौल प्रदान करके भारत के अल्पसेवित/असेवित क्षेत्रों में उद्यमिता की भावना को प्रोत्साहित करने के लिए _____ की शुरुआत की है।

- Ans
- 1. उत्पादन सम्बद्ध प्रोत्साहन योजना
 - 2. वन नेशन वन राशन नीति
 - 3. अटल समुदाय नवाचार केंद्र कार्यक्रम
 - 4. डिजिटल लाइब्रेरी मिशन

Question ID : 264330109124
Option 1 ID : 264330428776
Option 2 ID : 264330428775
Option 3 ID : 264330428773
Option 4 ID : 264330428774
Status : Answered
Chosen Option : 3

Q.2 Hydrogen ions cannot exist alone, but they exist after combining with water molecules. Which of the following is the correct way to show hydrogen ions?

- Ans
- 1. HO-
 - 2. H₃O⁺
 - 3. H₂
 - 4. H₂SO₄

Question ID : 264330138723
Option 1 ID : 264330543502
Option 2 ID : 264330543500
Option 3 ID : 264330543501
Option 4 ID : 264330543499
Status : Answered
Chosen Option : 2

Q.3 Which factor contributes to the occurrence of rainfall in the north-western parts of India during winters?

- Ans
- 1. Southwest Monsoon
 - 2. Trade Winds
 - 3. Western Disturbances
 - 4. Northeast Monsoon

Question ID : 264330174341
Option 1 ID : 264330683785
Option 2 ID : 264330683783
Option 3 ID : 264330683784
Option 4 ID : 264330683786
Status : Answered
Chosen Option : 3

Q.4 किस समिति ने सुझाव दिया कि करों का भुगतान करना भी नागरिकों का मौलिक कर्तव्य होना चाहिए?

- Ans
- 1. भूटा सिंह समिति
 - 2. स्वर्ण सिंह समिति
 - 3. चरण सिंह समिति
 - 4. जे एस वर्मा समिति

Question ID : 264330137413
Option 1 ID : 264330538280
Option 2 ID : 264330538282
Option 3 ID : 264330538281
Option 4 ID : 264330538279
Status : Answered
Chosen Option : 2

Q.5 Which of the following is NOT covered by the appellate jurisdiction of the Supreme Court?

- Ans
- 1. Civil cases
 - 2. Criminal cases
 - 3. Constitutional cases
 - 4. Conflicts between central and state

Question ID : 264330173527
Option 1 ID : 264330680587
Option 2 ID : 264330680588
Option 3 ID : 264330680589
Option 4 ID : 264330680590
Status : Not Answered
Chosen Option : --

Q.6 Har Ghar Tiranga movement was proposed in which year's Independence Day?

- Ans
- 1. 2020
 - 2. 2022
 - 3. 2021
 - 4. 2019

Question ID : 264330109616
Option 1 ID : 264330430742
Option 2 ID : 264330430744
Option 3 ID : 264330430743
Option 4 ID : 264330430741
Status : Answered
Chosen Option : 2

Q.7 Which of the following Constitutional Amendment Acts is related to the addition of eleventh fundamental duty in the Indian Constitution?

- Ans
- 1. 69th Constitutional Amendment Act
 - 2. 81st Constitutional Amendment Act
 - 3. 83rd Constitutional Amendment Act
 - 4. 86th Constitutional Amendment Act

Question ID : 264330180617
Option 1 ID : 264330708435
Option 2 ID : 264330708436
Option 3 ID : 264330708437
Option 4 ID : 264330708438
Status : Answered
Chosen Option : 4

Q.8 The festival of Pushkaralu is celebrated to promote the cultural heritage of which Indian state?

- Ans
- 1. Tamil Nadu
 - 2. Karnataka
 - 3. Kerala
 - 4. Andhra Pradesh

Question ID : 264330132419
Option 1 ID : 264330518771
Option 2 ID : 264330518774
Option 3 ID : 264330518773
Option 4 ID : 264330518772
Status : Answered
Chosen Option : 3

Q.9 The first edition of the Commonwealth Youth Games was held in the year:

- Ans
- 1. 2008
 - 2. 2004
 - 3. 2000
 - 4. 2011

Question ID : 264330118897
Option 1 ID : 264330466245
Option 2 ID : 264330466244
Option 3 ID : 264330466243
Option 4 ID : 264330466246
Status : Not Answered
Chosen Option : --

Q.10 विधान-परिषद के सदस्य के रूप में निर्वाचित होने के लिए किसी व्यक्ति की आयु वर्ष से कम नहीं होनी चाहिए।

- Ans
- 1. 25
 - 2. 35
 - 3. 30
 - 4. 21

Question ID : 264330120197
Option 1 ID : 264330471043
Option 2 ID : 264330471045
Option 3 ID : 264330471044
Option 4 ID : 264330471046
Status : Answered
Chosen Option : 1

Q.11 As we go down under water in a ocean the water pressure:

- Ans
- 1. decreases
 - 2. remains constant and equal to the atmospheric pressure
 - 3. increases
 - 4. remains less than atmospheric pressure

Question ID : 264330169097
Option 1 ID : 264330663193
Option 2 ID : 264330663194
Option 3 ID : 264330663192
Option 4 ID : 264330663191
Status : Answered
Chosen Option : 3

Q.12 1993-94 तक, गरीबी रेखा, _____ के आंकड़ों पर आधारित होती थी।

- Ans
- 1. मिश्रित संदर्भ अवधि (Mixed Reference Period)
 - 2. मिश्रित शोध अवधि (Mixed Research Period)
 - 3. समान संसाधन अवधि (Uniform Resource Period)
 - 4. समान शोध अवधि (Uniform Research Period)

Question ID : 264330183044
Option 1 ID : 264330717909
Option 2 ID : 264330717908
Option 3 ID : 264330717911
Option 4 ID : 264330717910
Status : Answered
Chosen Option : 4

Q.13 The ocean has _____ main temperature layers.

- Ans
- 1. five
 - 2. two
 - 3. four
 - 4. three

Question ID : 264330116382
Option 1 ID : 264330457613
Option 2 ID : 264330457614
Option 3 ID : 264330457616
Option 4 ID : 264330457615
Status : Not Answered
Chosen Option : --

Q.14 Which state does the noted Sindhi Sarangi player Lakha Khan belong to?

- Ans
- 1. Rajasthan
 - 2. Punjab
 - 3. Uttarakhand
 - 4. Haryana

Question ID : 264330110242
Option 1 ID : 264330433245
Option 2 ID : 264330433247
Option 3 ID : 264330433248
Option 4 ID : 264330433246
Status : Answered
Chosen Option : 1

Q.15 The headquarters of West Central Railway Zone of Indian Railway is located in _____.

- Ans
- 1. Jaipur
 - 2. Bhopal
 - 3. Agra
 - 4. Jabalpur

Question ID : 264330181118
Option 1 ID : 264330710417
Option 2 ID : 264330710416
Option 3 ID : 264330710415
Option 4 ID : 264330710418
Status : Answered
Chosen Option : 4

Q.16 मोरमुगाओ बंदरगाह किस राज्य में स्थित है?

- Ans
- 1. तमिलनाडु
 - 2. पश्चिम बंगाल
 - 3. गोवा
 - 4. महाराष्ट्र

Question ID : 264330182958
Option 1 ID : 264330717567
Option 2 ID : 264330717566
Option 3 ID : 264330717564
Option 4 ID : 264330717565
Status : Not Answered
Chosen Option : --

Q.17 दिए गए विकल्पों में से कौन-सा विकल्प, नागर मंदिर वास्तुकला में 'जगती' शब्द का सबसे अच्छा वर्णन करता है?

- Ans
- 1. ऊंचा चबूतरा, जो मुख्य देवी देवताओं का स्थान होता है
 - 2. ऊंचा चबूतरा, जिस पर ध्वज (झंडा) लगाया जाता है
 - 3. ऊंचा चबूतरा, जिस पर कलश होता है
 - 4. ऊंचा चबूतरा, जिस पर मंदिर बना होता है

Question ID : 264330165332
Option 1 ID : 264330648407
Option 2 ID : 264330648410
Option 3 ID : 264330648409
Option 4 ID : 264330648408
Status : Answered
Chosen Option : 4

Q.18 When was Rajiv Gandhi Khel Ratna Award renamed as Major Dhyan Chand Khel Ratna Award?

- Ans
- 1. 2022
 - 2. 2021
 - 3. 2020
 - 4. 2019

Question ID : 264330176746
Option 1 ID : 264330693202
Option 2 ID : 264330693200
Option 3 ID : 264330693199
Option 4 ID : 264330693201
Status : Answered
Chosen Option : 3

Q.19 कम्युनिस्ट जर्नल 'वैनगार्ड (Vanguard)' के संपादक बनने वाले स्वतंत्रता सेनानी का नाम बताइए।

- Ans
- 1. सी. राजगोपालाचारी
 - 2. एम.एन. रॉय
 - 3. के. केलप्पन
 - 4. पी. कृष्णा पिल्लई

Question ID : 264330171707
Option 1 ID : 264330673434
Option 2 ID : 264330673433
Option 3 ID : 264330673432
Option 4 ID : 264330673431
Status : Not Answered
Chosen Option : --

Q.20 The second edition of the Khelo India Winter Games 2021 was held in which of the following states/Union Territories?

- Ans
- 1. Sikkim
 - 2. Himachal Pradesh
 - 3. Jammu and Kashmir
 - 4. Uttarakhand

Question ID : 264330118444
Option 1 ID : 264330465177
Option 2 ID : 264330465180
Option 3 ID : 264330465179
Option 4 ID : 264330465178
Status : Answered
Chosen Option : 2

Q.21 Vyjayanthi Kashi is an exponent of which Indian classical dance form?

- Ans
- 1. Kuchipudi
 - 2. Bharatanatyam
 - 3. Mohiniattam
 - 4. Odissi

Question ID : 264330141329
Option 1 ID : 264330553652
Option 2 ID : 264330553651
Option 3 ID : 264330553654
Option 4 ID : 264330553653
Status : Answered
Chosen Option : 4

Q.22 Globalisation is a _____ phenomenon.

- Ans
- 1. multi-dimensional
 - 2. cultural only
 - 3. uni-dimensional only
 - 4. political only

Question ID : 264330117795
Option 1 ID : 264330462998
Option 2 ID : 264330462997
Option 3 ID : 264330462995
Option 4 ID : 264330462996
Status : Answered
Chosen Option : 1

Q.23 Which of the following statements is NOT correct about cell cycle?

- Ans
- 1. M is a meiosis phase.
 - 2. In G₂, phase cell prepare to divide.
 - 3. The correct sequence of cell cycle is G₁, S, G₂, M.
 - 4. DNA replication takes place in S cycle.

Question ID : 264330111892
Option 1 ID : 264330439655
Option 2 ID : 264330439656
Option 3 ID : 264330439653
Option 4 ID : 264330439654
Status : Not Answered
Chosen Option : --

Q.24 Which of the following cricketers has written an autobiography titled 'Six Machine'?

- Ans 1. Brendon McCullum
 2. Chris Gayle
 3. Jacques Kallis
 4. Adam Gilchrist

Question ID : 26433055354
Option 1 ID : 264330216400
Option 2 ID : 264330216401
Option 3 ID : 264330216403
Option 4 ID : 264330216402
Status : Not Answered
Chosen Option : --

Q.25 Who among the following is a Sangeet Natak Akademi award-winning Bharatanatyam dancer?

- Ans 1. Jayalakshmi Eshwar
 2. Kumkum Dhar
 3. Sunanda Nair
 4. M Sailaja

Question ID : 264330182985
Option 1 ID : 264330717674
Option 2 ID : 264330717675
Option 3 ID : 264330717673
Option 4 ID : 264330717672
Status : Answered
Chosen Option : 1

Q.26 लघु उद्योग को परिभाषित करने के लिए एक मानदंड क्या है?

- Ans 1. एक वर्ष की अवधि के दौरान कारोबार की राशि
 2. इकाई का आकार
 3. किसी विशेष वर्ष के दौरान इकाई की कुल बिक्री
 4. एक इकाई की संपत्ति पर अधिकतम निवेश की अनुमति

Question ID : 26433054614
Option 1 ID : 264330213443
Option 2 ID : 264330213440
Option 3 ID : 264330213441
Option 4 ID : 264330213442
Status : Answered
Chosen Option : 3

Q.27 मक्कू, तुइवई, सोनाई और रुक्नी किस नदी की सहायक नदियाँ हैं?

- Ans 1. बराक
 2. पेन्नार
 3. साबरमती
 4. तापी

Question ID : 264330141743
Option 1 ID : 264330555294
Option 2 ID : 264330555292
Option 3 ID : 264330555293
Option 4 ID : 264330555291
Status : Not Answered
Chosen Option : --

Q.28 When was Tattvabodhini Sabha established?

- Ans 1. 1851
 2. 1831
 3. 1843
 4. 1839

Question ID : 264330123742
Option 1 ID : 264330485006
Option 2 ID : 264330485003
Option 3 ID : 264330485004
Option 4 ID : 264330485005
Status : Answered
Chosen Option : 4

Q.29 As per Census 2011, which of the following states/union territories has the highest male literacy rate?

- Ans 1. Kerala
 2. Mizoram
 3. Chandigarh
 4. Lakshadweep

Question ID : 264330183021
Option 1 ID : 264330717816
Option 2 ID : 264330717817
Option 3 ID : 264330717819
Option 4 ID : 264330717818
Status : Answered
Chosen Option : 1

Q.30 पुदुक्कोट्टई दक्षिणमूर्ति पिल्लई एक प्रसिद्ध _____ वादक है।

- Ans 1. मेज़
 2. गिटार
 3. बाँसुरी
 4. कंजीरा

Question ID : 264330111933
Option 1 ID : 264330439820
Option 2 ID : 264330439817
Option 3 ID : 264330439819
Option 4 ID : 264330439818
Status : Not Answered
Chosen Option : --

Q.31 Which of the following states was selected by the Indian Government to try a new variety of wheat seeds for the first time during the green revolution?

- Ans 1. Madhya Pradesh
 2. Punjab
 3. Uttar Pradesh
 4. Bihar

Question ID : 264330116531
Option 1 ID : 264330458212
Option 2 ID : 264330458209
Option 3 ID : 264330458211
Option 4 ID : 264330458210
Status : Answered
Chosen Option : 2

Q.32 1969 में बैंकों के राष्ट्रीयकरण के दौरान निम्नलिखित में से किस बैंक का राष्ट्रीयकरण नहीं किया गया था?

- Ans
- 1. केनरा बैंक
 - 2. एसबीआई
 - 3. यूको बैंक
 - 4. बैंक ऑफ बड़ौदा

Question ID : 264330118182
Option 1 ID : 264330464545
Option 2 ID : 264330464543
Option 3 ID : 264330464544
Option 4 ID : 264330464546
Status : Answered
Chosen Option : 4

Q.33 'Sunny Days: An Autobiography' is written by which of the following Indian cricketers?

- Ans
- 1. Sunil Gavaskar
 - 2. Rahul Dravid
 - 3. Mohinder Amarnath
 - 4. Kapil Dev

Question ID : 26433055353
Option 1 ID : 264330216396
Option 2 ID : 264330216399
Option 3 ID : 264330216397
Option 4 ID : 264330216398
Status : Not Answered
Chosen Option : --

Q.34 Which of the following is NOT an element of the Competition Act 2002?

- Ans
- 1. Prohibition of anti-competitive agreements
 - 2. Regulation of combination
 - 3. Abuse of dominant position
 - 4. Prohibition of trade

Question ID : 264330111621
Option 1 ID : 264330438572
Option 2 ID : 264330438570
Option 3 ID : 264330438569
Option 4 ID : 264330438571
Status : Answered
Chosen Option : 3

Q.35 In which language is the Hathigumpha Inscription engraved?

- Ans
- 1. Sanskrit
 - 2. Hindi
 - 3. Pali
 - 4. Marathi

Question ID : 264330120010
Option 1 ID : 264330470298
Option 2 ID : 264330470295
Option 3 ID : 264330470296
Option 4 ID : 264330470297
Status : Not Answered
Chosen Option : --

Q.36 Who among the following Gupta kings is popularly known as the Napoleon of India?

- Ans 1. Samudragupta
 2. Kumaragupta I
 3. Ghatotkacha
 4. Vishnugupta

Question ID : 264330119472
Option 1 ID : 264330468171
Option 2 ID : 264330468172
Option 3 ID : 264330468173
Option 4 ID : 264330468174
Status : Answered
Chosen Option : 1

Q.37 अनुच्छेद 166 के अनुसार किसी राज्य सरकार की समस्त कार्यपालिका कार्यवाही किसके नाम पर व्यक्त की जाएगी ?

- Ans 1. राज्यपाल
 2. मुख्यमंत्री
 3. राज्य महाधिवक्ता
 4. राष्ट्रपति

Question ID : 26433069889
Option 1 ID : 264330274061
Option 2 ID : 264330274062
Option 3 ID : 264330274063
Option 4 ID : 264330274060
Status : Answered
Chosen Option : 1

Q.38 Who among the following was given the title of 'Queen of Kathak' by Gurudev Rabindranath Tagore?

- Ans 1. Rukmini Devi Arundale
 2. Sanjukta Panigrahi
 3. Shanta Rao
 4. Sitara Devi

Question ID : 26433097125
Option 1 ID : 264330381197
Option 2 ID : 264330381199
Option 3 ID : 264330381200
Option 4 ID : 264330381198
Status : Answered
Chosen Option : 4

Q.39 इल्लुतमिश का कुतुबुद्दीन ऐबक से क्या संबंध था?

- Ans 1. दामाद
 2. भाई
 3. बहनोई
 4. पुत्र

Question ID : 264330120287
Option 1 ID : 264330471400
Option 2 ID : 264330471401
Option 3 ID : 264330471402
Option 4 ID : 264330471399
Status : Answered
Chosen Option : 1

Q.40 बौद्धों द्वारा निर्मित कन्हेरी गुफाएँ निम्नलिखित में से किस राज्य में स्थित हैं?

- Ans 1. गुजरात
 2. महाराष्ट्र
 3. बिहार
 4. मध्य प्रदेश

Question ID : 26433074095
Option 1 ID : 264330290502
Option 2 ID : 264330290503
Option 3 ID : 264330290500
Option 4 ID : 264330290501
Status : Answered
Chosen Option : 3

Q.41 Which of the following fundamental duties was added by the 86th Constitutional Act, 2002?

- Ans 1. To protect and improve the natural environment
 2. To safeguard public property
 3. To uphold and protect the sovereignty, unity and integrity of India
 4. To provide opportunities for education to his/her child between 6 and 14 years

Question ID : 264330110110
Option 1 ID : 264330432718
Option 2 ID : 264330432717
Option 3 ID : 264330432720
Option 4 ID : 264330432719
Status : Answered
Chosen Option : 4

Q.42 In which year did the Indian Government develop 'SMILE' ('Support for Marginalized Individuals for Livelihood and Enterprise')?

- Ans 1. 2019
 2. 2021
 3. 2022
 4. 2018

Question ID : 264330130601
Option 1 ID : 264330511517
Option 2 ID : 264330511516
Option 3 ID : 264330511515
Option 4 ID : 264330511518
Status : Not Answered
Chosen Option : --

Q.43 Qandahar was lost to the _____ during the reign of Shah Jahan.

- Ans 1. Seljuks
 2. Uzbegs
 3. Pahlavis
 4. Safavids

Question ID : 264330106568
Option 1 ID : 264330418575
Option 2 ID : 264330418573
Option 3 ID : 264330418576
Option 4 ID : 264330418574
Status : Not Answered
Chosen Option : --

Q.44 In which of the following kingdoms is the eukaryotic cell NOT found?

- Ans 1. Monera
 2. Animalia
 3. Protista
 4. Fungi

Question ID : 264330117589
Option 1 ID : 264330462383
Option 2 ID : 264330462381
Option 3 ID : 264330462382
Option 4 ID : 264330462384
Status : Answered
Chosen Option : 2

Q.45 1875 में स्थापित निम्नलिखित में से कौन-सा संगठन मूर्ति पूजा का विरोध करता है और वेदों की अचूकता का समर्थन करता है?

- Ans 1. आर्य समाज
 2. परमहंस मंडली
 3. प्रार्थना समाज
 4. रामकृष्ण मिशन

Question ID : 264330130558
Option 1 ID : 264330511346
Option 2 ID : 264330511344
Option 3 ID : 264330511343
Option 4 ID : 264330511345
Status : Answered
Chosen Option : 4

Q.46 The 97th Constitutional Amendment Act of 2011 added a new directive principle of state policy relating to _____.

- Ans 1. interstate relations
 2. quasi-judicial bodies
 3. cooperative societies
 4. rivers and water bodies

Question ID : 264330130455
Option 1 ID : 264330510932
Option 2 ID : 264330510931
Option 3 ID : 264330510933
Option 4 ID : 264330510934
Status : Not Answered
Chosen Option : --

Q.47 Through which of the following Government of India Acts the Montagu-Chelmsford Reforms introduced Dyarchy in the provinces?

- Ans 1. 1858
 2. 1894
 3. 1919
 4. 1935

Question ID : 264330118597
Option 1 ID : 264330465640
Option 2 ID : 264330465641
Option 3 ID : 264330465639
Option 4 ID : 264330465642
Status : Answered
Chosen Option : 3

Q.48 भारत सरकार ने क्षेत्रीय ग्रामीण बैंकों की स्थापना किस वर्ष शुरू की थी?

- Ans 1. 1975 में
 2. 1992 में
 3. 2005 में
 4. 1951 में

Question ID : 264330111726
Option 1 ID : 264330438990
Option 2 ID : 264330438991
Option 3 ID : 264330438992
Option 4 ID : 264330438989
Status : Not Answered
Chosen Option : --

Q.49 निम्नलिखित में से कौन एक प्रसिद्ध 'सत्रीया' नर्तकी है?

- Ans 1. शारोदी सैकिया
 2. अलुना काबुईनी
 3. सोनल मानसिंह
 4. मल्लिका साराभाई

Question ID : 264330106197
Option 1 ID : 264330417089
Option 2 ID : 264330417092
Option 3 ID : 264330417091
Option 4 ID : 264330417090
Status : Answered
Chosen Option : 2

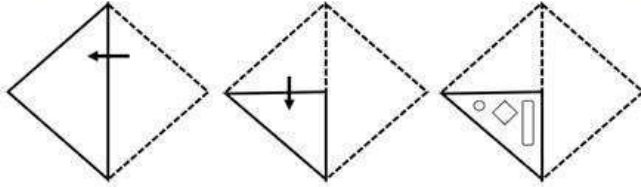
Q.50 निम्नलिखित में से कौन-सा अंतरराष्ट्रीय संगठन शतरंज का शासी निकाय है?

- Ans 1. ICC
 2. IOC
 3. FIDE
 4. FIFA

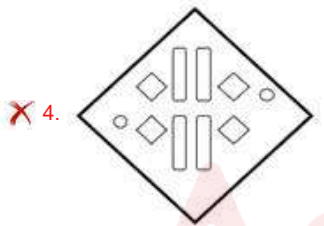
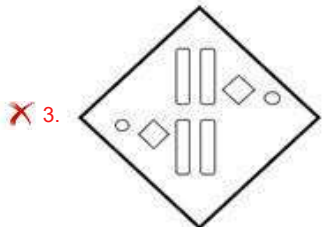
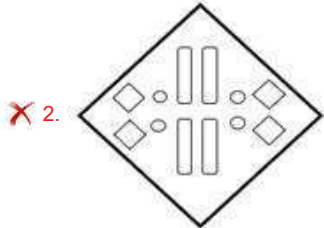
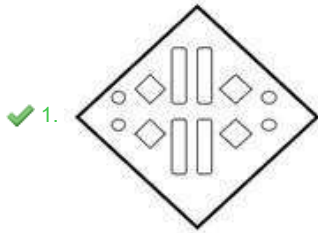
Question ID : 264330134271
Option 1 ID : 264330526082
Option 2 ID : 264330526081
Option 3 ID : 264330526080
Option 4 ID : 264330526079
Status : Answered
Chosen Option : 1

Section : Reasoning

Q.1 A paper is folded and cut as shown below. How will it appear when unfolded?



Ans



Question ID : 26433076502

Option 1 ID : 264330300073

Option 2 ID : 264330300075

Option 3 ID : 264330300074

Option 4 ID : 264330300072

Status : Answered

Chosen Option : 1

Q.2 Which figure should replace the question mark (?) if the series were to be continued?

N	9	2	9	
V 2 9 ☆	N 2	N V 9 ☆	2 V	?
☆	V	☆	N	

Ans

✗ 1.

N
V ☆ 2
9

✗ 2.

V
N ☆ 9
2

✓ 3.

V
2 N 9
☆

✗ 4.

V
9 2 N
☆

Question ID : 264330130802

Option 1 ID : 264330512322

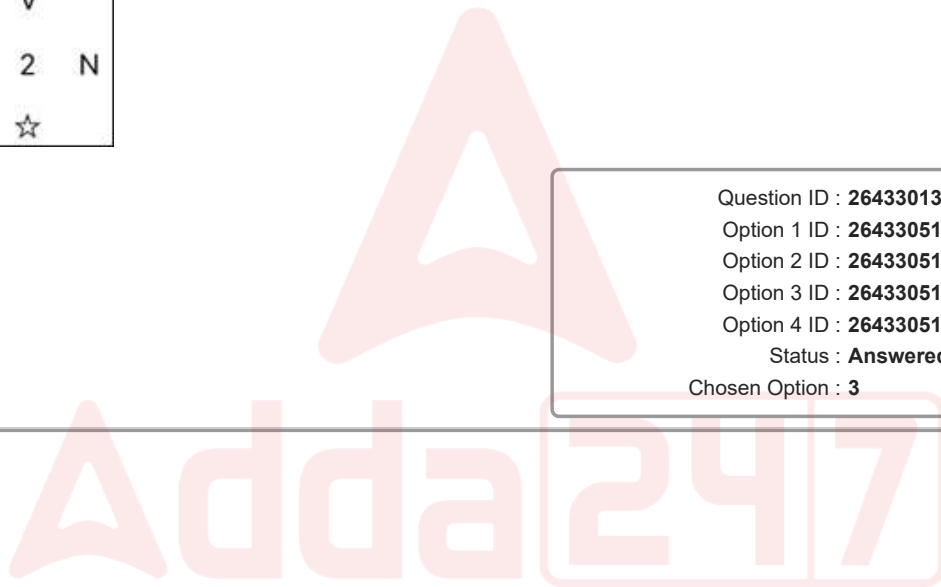
Option 2 ID : 264330512320

Option 3 ID : 264330512321

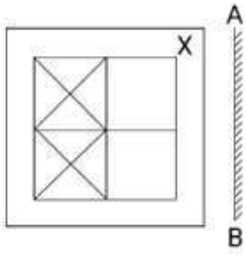
Option 4 ID : 264330512319

Status : Answered

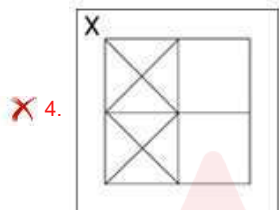
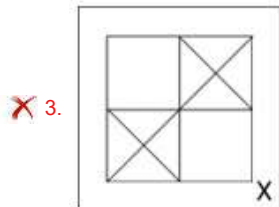
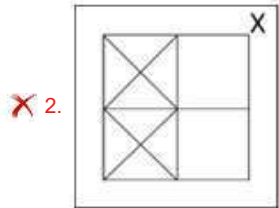
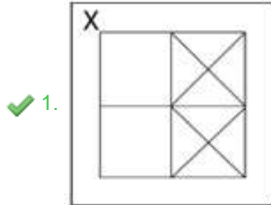
Chosen Option : 3



Q.3 Select the correct mirror image of the given figure when the mirror is placed at 'AB' as shown.



Ans



Question ID : 264330114261

Option 1 ID : 264330449132

Option 2 ID : 264330449129

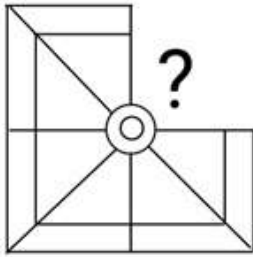
Option 3 ID : 264330449130

Option 4 ID : 264330449131

Status : Answered

Chosen Option : 1

Q.4 Select the figure from the given options that will replace the question mark (?) in the figure given below to complete the pattern.



Ans

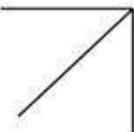
✓ 1.



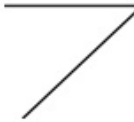
✗ 2.



✗ 3.



✗ 4.



Question ID : 264330118116

Option 1 ID : 264330464282

Option 2 ID : 264330464280

Option 3 ID : 264330464281

Option 4 ID : 264330464279

Status : Answered

Chosen Option : 1

Q.5 Read the given statements and conclusions carefully. Assuming that the information given in the statements is true, even if it appears to be at variance with commonly known facts, decide which of the given conclusions logically follow(s) from the statements.

Statements:

- All bags are pants.
- All pants are eggs.
- All eggs are flowers.

Conclusions:

- I. All pants are flowers.
- II. All pants are bags.
- III. All flowers are bags.
- IV. All flowers are pants.

- Ans
- ✗ 1. Only conclusion III follows
 - ✗ 2. Only conclusion IV follows
 - ✓ 3. Only conclusion I follows
 - ✗ 4. Only conclusion II follows

Question ID : 26433078847

Option 1 ID : 264330309402

Option 2 ID : 264330309403

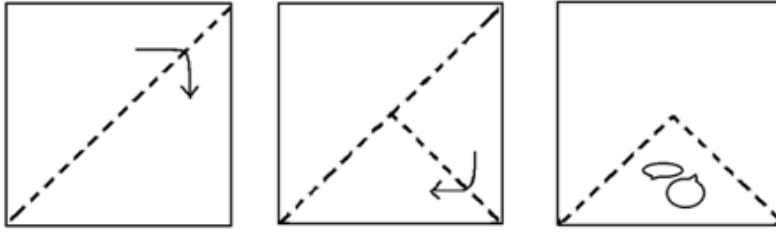
Option 3 ID : 264330309400

Option 4 ID : 264330309401

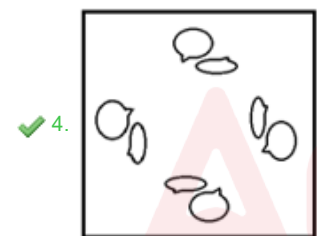
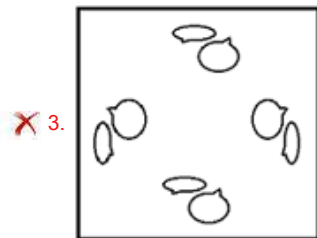
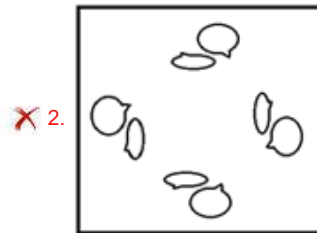
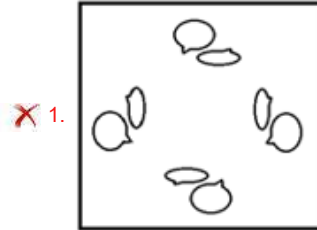
Status : Answered

Chosen Option : 3

Q.6 The sequence of folding a piece of paper and the manner in which the folded paper is cut is shown in the following figure. How would this paper look when unfolded?



Ans



Question ID : 264330111295

Option 1 ID : 264330437266

Option 2 ID : 264330437267

Option 3 ID : 264330437268

Option 4 ID : 264330437265

Status : Answered

Chosen Option : 4

Q.7 Six people, S, T, U, V, W and X, are sitting in a straight row facing north. Only two people sit to the left of U. Only two people sit between U and X. T sits to the immediate right of S. W sits to the immediate left of V. V is not a neighbour of X. Who sits at the extreme left end of the row?

- Ans
- 1. W
 - 2. X
 - 3. V
 - 4. S

Question ID : 26433089505
Option 1 ID : 264330351522
Option 2 ID : 264330351524
Option 3 ID : 264330351521
Option 4 ID : 264330351523
Status : Answered
Chosen Option : 1

Q.8 In a certain code language, 'SITE' is written as 'WMXI' and 'MAKE' is written as 'QEOI' . How will 'TERM' be written in that language?

- Ans
- 1. XHUP
 - 2. XIVQ
 - 3. WHVQ
 - 4. WIUO

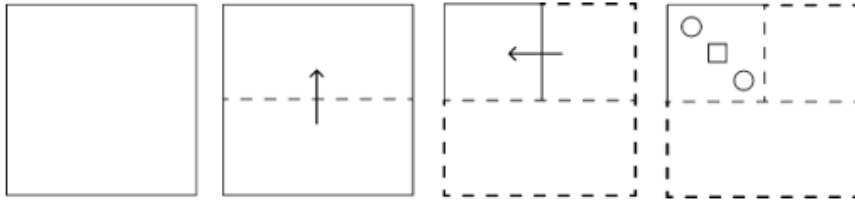
Question ID : 26433087173
Option 1 ID : 264330342330
Option 2 ID : 264330342331
Option 3 ID : 264330342329
Option 4 ID : 264330342332
Status : Answered
Chosen Option : 2

Q.9 Which of the following options will replace the question mark (?) in the given series?
286, 257, 230, 205, ?, 161

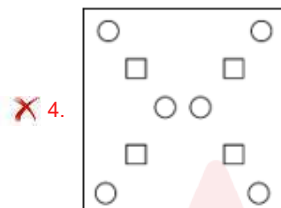
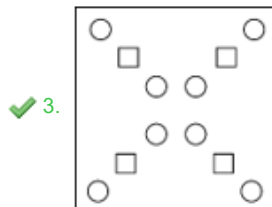
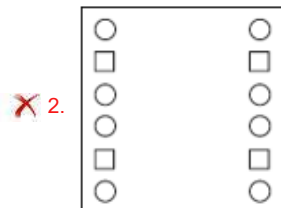
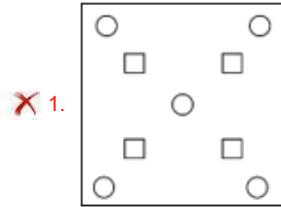
- Ans
- 1. 188
 - 2. 178
 - 3. 182
 - 4. 192

Question ID : 264330109430
Option 1 ID : 264330429997
Option 2 ID : 264330429999
Option 3 ID : 264330430000
Option 4 ID : 264330429998
Status : Answered
Chosen Option : 3

Q.10 A square sheet of paper is folded along the dotted line successively along the directions shown and is then punched in the last. How would the paper look when unfolded?



Ans



Question ID : 264330172416

Option 1 ID : 264330676216

Option 2 ID : 264330676217

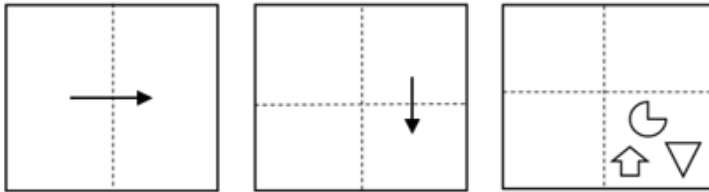
Option 3 ID : 264330676215

Option 4 ID : 264330676218

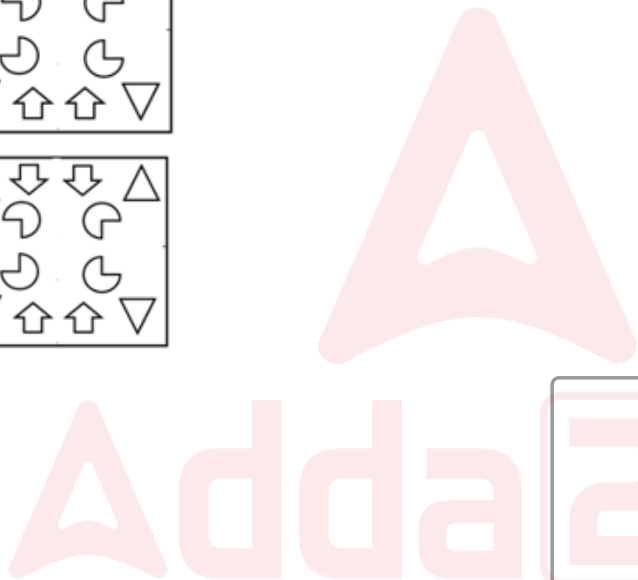
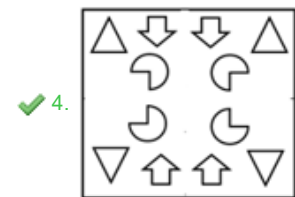
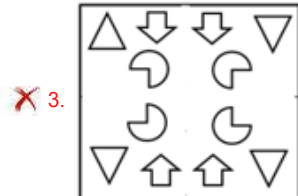
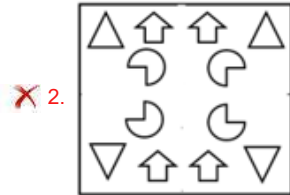
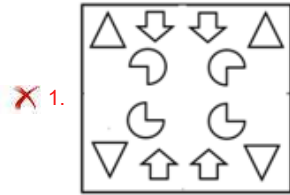
Status : Answered

Chosen Option : 3

Q.11 A paper is folded and cut as shown below. How will it appear when unfolded?

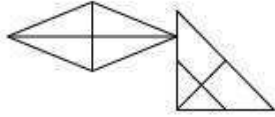


Ans



Question ID : 264330113650
 Option 1 ID : 264330446685
 Option 2 ID : 264330446687
 Option 3 ID : 264330446688
 Option 4 ID : 264330446686
 Status : Answered
 Chosen Option : 4

Q.12 How many triangles are there in the given figure?



- Ans
- 1. 12
 - 2. 8
 - 3. 14
 - 4. 10

Question ID : 26433080667
Option 1 ID : 264330316603
Option 2 ID : 264330316601
Option 3 ID : 264330316604
Option 4 ID : 264330316602
Status : Answered
Chosen Option : 3

Q.13 1, 2, 3, 4, 5 and 6 are written on different faces of a dice. Three different positions of the same dice are shown below. Find the number on the face opposite to the one showing '6'.

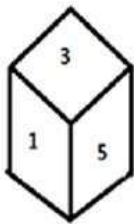


figure 1

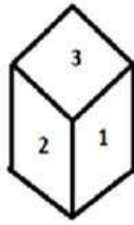


figure 2

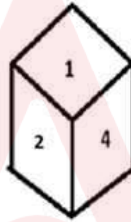


figure 3

- Ans
- 1. 4
 - 2. 5
 - 3. 2
 - 4. 1

Question ID : 264330111677
Option 1 ID : 264330438794
Option 2 ID : 264330438795
Option 3 ID : 264330438796
Option 4 ID : 264330438793
Status : Answered
Chosen Option : 4

Q.14 Select the option that is related to the third term in the same way as the second term is related to the first term and the sixth term is related to the fifth term.
 $63 : 9 :: 84 : ? :: 119 : 17$

- Ans
- 1. 4
 - 2. 8
 - 3. 12
 - 4. 16

Question ID : 264330102256

Option 1 ID : 264330401489

Option 2 ID : 264330401490

Option 3 ID : 264330401492

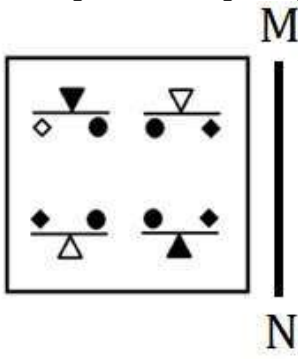
Option 4 ID : 264330401491

Status : Answered

Chosen Option : 3

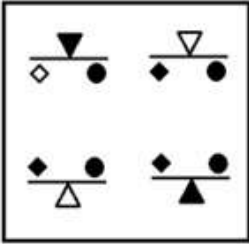


Q.15 Select the correct mirror image from the following options, when the mirror is placed on the right side of the given figure.

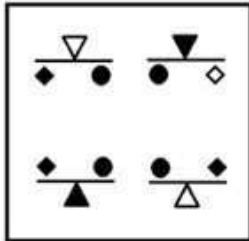


Ans

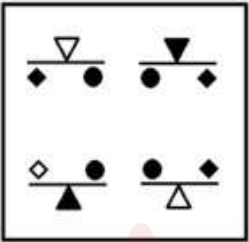
✗ 1.



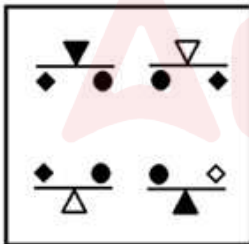
✓ 2.



✗ 3.



✗ 4.



Question ID : 264330112311

Option 1 ID : 264330441329

Option 2 ID : 264330441331

Option 3 ID : 264330441332

Option 4 ID : 264330441330

Status : Answered

Chosen Option : 2

Q.16 Select the set in which the numbers are related in the same way as are the numbers of the following sets.

(NOTE : Operations should be performed on the whole numbers, without breaking down the numbers into its constituent digits. E.g. 13 – Operations on 13 such as adding /deleting /multiplying etc. to 13 can be performed. Breaking down 13 into 1 and 3 and then performing mathematical operations on 1 and 3 is NOT allowed)
(676, 553), (784, 661)

Ans 1. (547, 424)

2. (421, 301)

3. (691, 581)

4. (752, 628)

Question ID : 26433052036

Option 1 ID : 264330203447

Option 2 ID : 264330203446

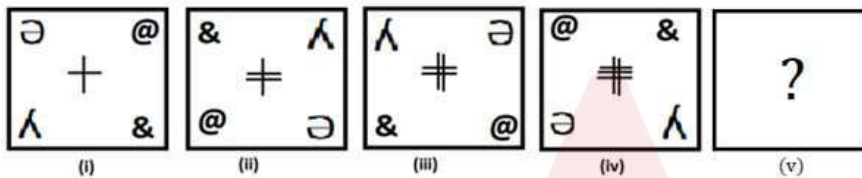
Option 3 ID : 264330203449

Option 4 ID : 264330203448

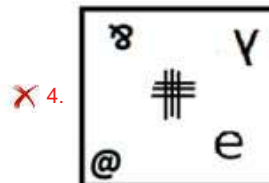
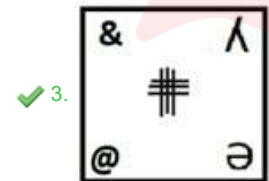
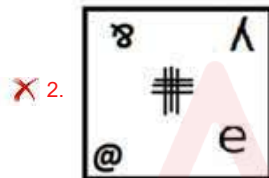
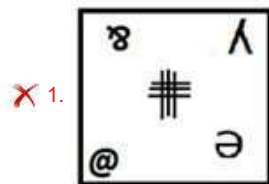
Status : Answered

Chosen Option : 1

Q.17 Select the figure from among the given options that can replace the question mark (?) in the following series.



Ans



Question ID : 264330106551

Option 1 ID : 264330418506

Option 2 ID : 264330418505

Option 3 ID : 264330418507

Option 4 ID : 264330418508

Status : Answered

Chosen Option : 3

Q.18 उस विकल्प का चयन कीजिए, जो तीसरे शब्द से उसी प्रकार संबंधित है, जिस प्रकार दूसरा शब्द पहले शब्द से संबंधित है।
(शब्दों को अंग्रेजी/हिंदी के अर्थपूर्ण शब्दों के रूप में माना जाना चाहिए और ये शब्द, अक्षरों की संख्या/ व्यंजनों/स्वरों की संख्या के आधार पर एक-दूसरे से संबंधित नहीं होने चाहिए।)
चूजे (Chicken) : ब्रूड (Brood) :: मधुमक्खियां (Bees) : ?

- Ans
- 1. गैंग (Gang)
 - 2. मॉब (Mob)
 - 3. लीग (League)
 - 4. स्वार्म (Swarm)

Question ID : 26433069169
Option 1 ID : 264330271189
Option 2 ID : 264330271188
Option 3 ID : 264330271191
Option 4 ID : 264330271190
Status : Answered
Chosen Option : 4

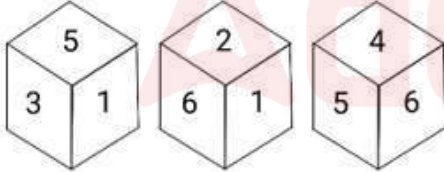
Q.19 Which two signs should be interchanged to make the following equation correct?

$$8 - 2 \times 49 \div 7 + 2 = 11$$

- Ans
- 1. + and -
 - 2. - and \times
 - 3. - and +
 - 4. + and \times

Question ID : 264330101086
Option 1 ID : 264330396889
Option 2 ID : 264330396891
Option 3 ID : 264330396890
Option 4 ID : 264330396892
Status : Answered
Chosen Option : 2

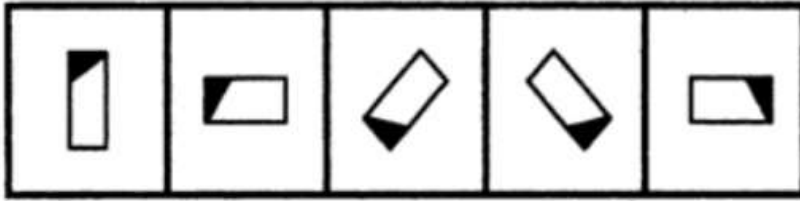
Q.20 Three different positions of the same dice are shown. Find the number on the face opposite to the face showing '6'.



- Ans
- 1. 4
 - 2. 5
 - 3. 3
 - 4. 1

Question ID : 264330112037
Option 1 ID : 264330440236
Option 2 ID : 264330440235
Option 3 ID : 264330440234
Option 4 ID : 264330440233
Status : Answered
Chosen Option : 3

Q.21 Select the figure that will come next in the following figure series.




Ans

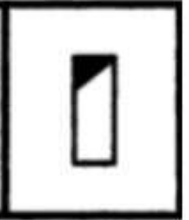
✗ 1.



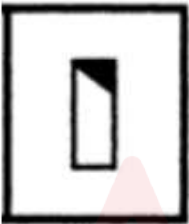
✗ 2.



✗ 3.



✓ 4.



Question ID : 26433090226

Option 1 ID : 264330354382

Option 2 ID : 264330354381

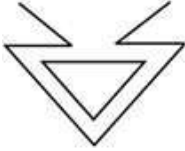
Option 3 ID : 264330354383

Option 4 ID : 264330354384

Status : Answered

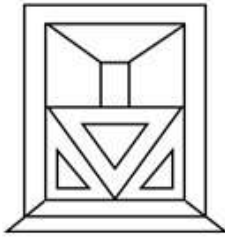
Chosen Option : 4

Q.22 Select the option in which the given figure is embedded (rotation is NOT allowed).



Ans

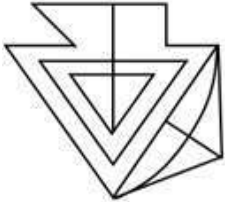
✗ 1.



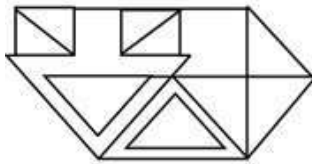
✗ 2.



✗ 3.



✓ 4.



Question ID : 264330114688

Option 1 ID : 264330450838

Option 2 ID : 264330450839

Option 3 ID : 264330450840

Option 4 ID : 264330450837

Status : Answered

Chosen Option : 4

Q.23 Which of the following terms will replace the question mark (?) in the given series?
BMXO, EOUM, ?, KSOI, NULG

Ans ✗ 1. FQRL

✓ 2. HQRK

✗ 3. HORL

✗ 4. FQSK

Question ID : 264330102174

Option 1 ID : 264330401161

Option 2 ID : 264330401162

Option 3 ID : 264330401163

Option 4 ID : 264330401164

Status : Answered


Chosen Option : 2

Q.24 Select the option in which the given figure is embedded. (Rotation is NOT allowed.)

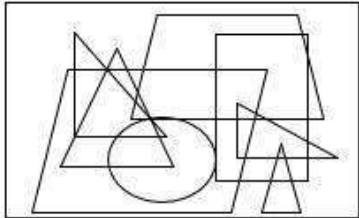


Ans

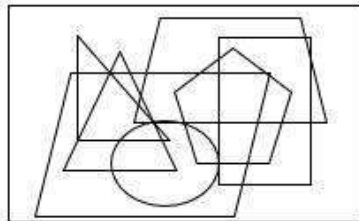
1.



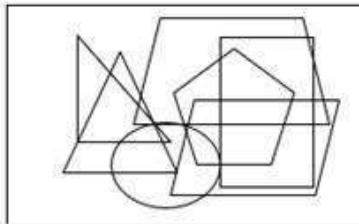
2.



3.



4.



Question ID : 26433092516

Option 1 ID : 264330363353

Option 2 ID : 264330363355

Option 3 ID : 264330363354

Option 4 ID : 264330363356

Status : Answered

Chosen Option : 3

Q.25 Select the correct combination of mathematical signs that can sequentially replace the * signs and balance the given equation.

$$12 * 6 * 3 * 2 * 8 * 4$$

Ans 1. +, x, -, +, =

2. +, x, -, =, +

3. +, -, x, +, =

4. ÷, -, x, +, =

Question ID : 26433079085

Option 1 ID : 264330310344

Option 2 ID : 264330310346

Option 3 ID : 264330310347

Option 4 ID : 264330310345

Status : Answered

Chosen Option : 4

Q.1 A sum of money on compound interest becomes double of itself in 3 years. How many years will it take for the amount to become eight times of itself at the same rate of interest?

- Ans 1. 7
 2. 9
 3. 5
 4. 8

Question ID : 264330104409
Option 1 ID : 264330409937
Option 2 ID : 264330409939
Option 3 ID : 264330409940
Option 4 ID : 264330409938
Status : Answered
Chosen Option : 2

Q.2 Two numbers are in the ratio 5 : 7. The product of their HCF and LCM is 2835. What is the sum of the numbers?

- Ans 1. 108
 2. 107
 3. 109
 4. 106

Question ID : 264330104270
Option 1 ID : 264330409383
Option 2 ID : 264330409382
Option 3 ID : 264330409384
Option 4 ID : 264330409381
Status : Answered
Chosen Option : 1

Q.3 If ₹10,400 is divided into three parts among P, Q and R proportional to $\frac{1}{2} : \frac{1}{5} : \frac{1}{6}$, then Q's share (in ₹) will be:

- Ans 1. 2,800
 2. 2,000
 3. 1,600
 4. 2,400

Question ID : 264330129426
Option 1 ID : 264330507072
Option 2 ID : 264330507071
Option 3 ID : 264330507070
Option 4 ID : 264330507073
Status : Answered
Chosen Option : 4

Q.4 Ramesh lent some amount of money at 12% simple interest and an equal amount of money at 15% simple interest, each for 2 years. If his total interest was ₹675, the amount lent was (lent at 12%):

- Ans
- 1. ₹1,150
 - 2. ₹1,550
 - 3. ₹1,350
 - 4. ₹1,250

Question ID : 264330118423
Option 1 ID : 264330465093
Option 2 ID : 264330465096
Option 3 ID : 264330465095
Option 4 ID : 264330465094
Status : Answered
Chosen Option : 4

Q.5 A positive integer is said to be prime if it is not divisible by any positive integer other than itself and one. Let K be a prime number strictly greater than 5. When K^2+19 is divided by 12, the remainder will be:

- Ans
- 1. 8
 - 2. 1
 - 3. 7
 - 4. 5

Question ID : 264330104280
Option 1 ID : 264330409424
Option 2 ID : 264330409421
Option 3 ID : 264330409423
Option 4 ID : 264330409422
Status : Answered
Chosen Option : 1

Q.6 In a school, 45% of the staff is female. 80% of the female staff and 60% of the male staff are postgraduates. Find the percentage of the non-postgraduate staff in the school.

- Ans
- 1. 31%
 - 2. 64%
 - 3. 42%
 - 4. 53%

Question ID : 264330130072
Option 1 ID : 264330509519
Option 2 ID : 264330509522
Option 3 ID : 264330509520
Option 4 ID : 264330509521
Status : Answered
Chosen Option : 1

Q.7 Komal sold two devices, each for ₹4,982. If she made 6% profit on the first and 6% loss on the second, what is the total cost of both the devices?

- Ans
- 1. ₹11,000
 - 2. ₹9,000
 - 3. ₹8,000
 - 4. ₹10,000

Question ID : 264330103613
Option 1 ID : 264330406760
Option 2 ID : 264330406758
Option 3 ID : 264330406757
Option 4 ID : 264330406759
Status : Answered
Chosen Option : 4

Q.8 A is thrice as good a workman as B and is, therefore, able to finish a job in 60 days less than B. Working together, they can do it in:

- Ans
- 1. $23\frac{3}{4}$ days
 - 2. $22\frac{1}{2}$ days
 - 3. $22\frac{3}{4}$ days
 - 4. $23\frac{1}{2}$ days

Question ID : 264330104209
Option 1 ID : 264330409140
Option 2 ID : 264330409137
Option 3 ID : 264330409138
Option 4 ID : 264330409139
Status : Answered
Chosen Option : 2

Q.9 Simplify the following.

$$12 - [2.06 + \{2.57 + (9.91 - 5.09 - 0.76)\}]$$

- Ans
- 1. 1.79
 - 2. 1.99
 - 3. 2.17
 - 4. 2.79

Question ID : 264330118037
Option 1 ID : 264330463966
Option 2 ID : 264330463965
Option 3 ID : 264330463964
Option 4 ID : 264330463963
Status : Answered
Chosen Option : 4

Q.10 What is the average of 144, 169,196, 225 and 256?

- Ans
- 1. 108
 - 2. 208
 - 3. 188
 - 4. 198

Question ID : 264330130907
Option 1 ID : 264330512742
Option 2 ID : 264330512741
Option 3 ID : 264330512740
Option 4 ID : 264330512739
Status : Answered
Chosen Option : 4

Q.11 A number is first decreased by 30% and then, increased by 40%. The resulting number is again increased by 5%. What is the net increase or decrease percentage?

- Ans
- 1. Decrease of 3.4%
 - 2. Increase of 3.4%
 - 3. Increase of 2.9%
 - 4. Decrease of 2.9%

Question ID : 264330177575
Option 1 ID : 264330696416
Option 2 ID : 264330696415
Option 3 ID : 264330696417
Option 4 ID : 264330696418
Status : Answered
Chosen Option : 3

Q.12 If the capacity of a cylindrical tank is $14,168 \text{ m}^3$ and the diameter of its base is 28 m, then find the depth of the tank (in m).

(Take $\pi = \frac{22}{7}$)

- Ans
- 1. 30
 - 2. 27
 - 3. 32
 - 4. 23

Question ID : 264330112439
Option 1 ID : 264330441842
Option 2 ID : 264330441844
Option 3 ID : 264330441841
Option 4 ID : 264330441843
Status : Answered
Chosen Option : 4

Q.13 Zeeshan travelled for 40 minutes at a speed of 75 km/h and for 20 minutes at 60 km/h. Find his average speed (in km/h) during the journey.

Ans 1. 70

2. 65

3. 67.5

4. 72.5

Question ID : 264330122846

Option 1 ID : 264330481451

Option 2 ID : 264330481454

Option 3 ID : 264330481452

Option 4 ID : 264330481453

Status : Answered

Chosen Option : 1

Q.14 A shopkeeper sells his goods at a 30% discount. Find the marked price of an article whose selling price is ₹1,190.

Ans 1. ₹1,800

2. ₹1,500

3. ₹1,700

4. ₹1,600

Question ID : 264330109250

Option 1 ID : 264330429280

Option 2 ID : 264330429278

Option 3 ID : 264330429277

Option 4 ID : 264330429279

Status : Answered

Chosen Option : 3

Q.15 A tower is topped by a hemispherical dome that has a surface area of 363π sq.ft approximately. Find the volume of the dome (in cubic ft).

Ans 1. 665.7π

2. 887.3π

3. 792.7π

4. 724.3π

Question ID : 264330111495

Option 1 ID : 264330438065

Option 2 ID : 264330438068

Option 3 ID : 264330438067

Option 4 ID : 264330438066

Status : Answered

Chosen Option : 2

Q.1 In MS Excel 365 what is the cell address of the cell two columns to the right and three rows down from cell D7?

- Ans
- 1. F9
 - 2. E9
 - 3. G10
 - 4. F10

Question ID : 264330177654
Option 1 ID : 264330696733
Option 2 ID : 264330696734
Option 3 ID : 264330696731
Option 4 ID : 264330696732
Status : Answered
Chosen Option : 4

Q.2 Where is the position of the menu bar in accordance with the title bar in MS word 365?

- Ans
- 1. Menu bar is situated below the title bar.
 - 2. Menu bar is situated above the title bar.
 - 3. Menu bar is situated to the left of the title bar.
 - 4. Menu bar is situated to the right of the title bar.

Question ID : 264330171419
Option 1 ID : 264330672292
Option 2 ID : 264330672291
Option 3 ID : 264330672293
Option 4 ID : 264330672294
Status : Answered
Chosen Option : 1

Q.3 In MS Excel 365 what is the Microsoft Excel formula to create an absolute cell reference for cell B2?

- Ans
- 1. B2
 - 2. \$B\$2
 - 3. \$B2
 - 4. B\$2

Question ID : 264330180679
Option 1 ID : 264330708684
Option 2 ID : 264330708683
Option 3 ID : 264330708685
Option 4 ID : 264330708686
Status : Answered
Chosen Option : 1

Q.4 In Microsoft Excel 365, how do you start to write a formula?

- Ans
- 1. By typing =
 - 2. By typing ;
 - 3. By typing /
 - 4. By typing :

Question ID : 264330182752
Option 1 ID : 264330716780
Option 2 ID : 264330716781
Option 3 ID : 264330716782
Option 4 ID : 264330716779
Status : Answered
Chosen Option : 1

Q.5 Which of the following is an Internet accessing technique where computer uses its modem to dial a telephone number given to the user by an Internet Service Provider?

- Ans**
- 1. Digital Subscriber Line
 - 2. Dial up Connection
 - 3. Broadband Connection
 - 4. Integrated Services Digital Network (ISDN) Service

Question ID : **264330182765**
Option 1 ID : **264330716834**
Option 2 ID : **264330716831**
Option 3 ID : **264330716832**
Option 4 ID : **264330716833**
Status : **Not Answered**
Chosen Option : --

Q.6 In MS-Word 365, which action allows you to replace a specific word or phrase throughout the entire document?

- Ans**
- 1. Cut
 - 2. Copy
 - 3. Paste
 - 4. Find and Replace

Question ID : **264330173352**
Option 1 ID : **264330679890**
Option 2 ID : **264330679887**
Option 3 ID : **264330679888**
Option 4 ID : **264330679889**
Status : **Answered**
Chosen Option : **4**

Q.7 In MS-Word 365, what is the primary difference between the 'Save' and 'Save As' commands?

- Ans**
- 1. 'Save' is used to save the document with a new filename or in a different location, while 'Save As' is used to save the document for the first time.
 - 2. 'Save' is used to save the document in the cloud storage, while 'Save As' is used to save the document on the local computer.
 - 3. 'Save' is used to save the document for the first time, while 'Save As' is used to save the document with a new filename or in a different location.
 - 4. Both 'Save' and 'Save As' perform the same function of saving the document; they are just two different names for the same command.

Question ID : **264330173348**
Option 1 ID : **264330679872**
Option 2 ID : **264330679874**
Option 3 ID : **264330679871**
Option 4 ID : **264330679873**
Status : **Answered**
Chosen Option : **3**

Q.8 Which option in Page Setup of MS word 365 determines whether the content of the document is displayed vertically or horizontally?

- Ans**
- 1. Columns
 - 2. Paper Size
 - 3. Margins
 - 4. Orientation

Question ID : 264330173589
Option 1 ID : 264330680838
Option 2 ID : 264330680835
Option 3 ID : 264330680837
Option 4 ID : 264330680836
Status : Answered
Chosen Option : 4

Q.9 Which of the following is an effective method to handle SPAM emails?

- Ans**
- 1. Forward the email to all your contacts
 - 2. Mark the email as SPAM or Junk
 - 3. Unsubscribe from all mailing lists
 - 4. Reply to the sender asking them to stop

Question ID : 264330174459
Option 1 ID : 264330684258
Option 2 ID : 264330684257
Option 3 ID : 264330684255
Option 4 ID : 264330684256
Status : Answered
Chosen Option : 2

Q.10 Which of the following is the most appropriate option to print pages 1, 3, 5 and so on in MS Word 365?

- Ans**
- 1. Print Odd pages
 - 2. Print
 - 3. Print Even pages
 - 4. Print all

Question ID : 264330176716
Option 1 ID : 264330693079
Option 2 ID : 264330693082
Option 3 ID : 264330693080
Option 4 ID : 264330693081
Status : Answered
Chosen Option : 1

Constable Executive Male and Female in Delhi Police Examination 2023

Roll Number	
Candidate Name	
Venue Name	iON Digital Zone iDZ Ram Ganga Vihar Phase 2
Exam Date	16/11/2023
Exam Time	9:00 AM - 10:30 AM
Subject	Constable Executive Male and Female in Delhi Police Examination 2023

Section : General Knowledge

- Q.1** Which of the following statements is/are true about NABARD?
I. NABARD was formed on the recommendation of Sivaraman Committee.
II. NABARD came into existence in 1980.
III. It was set up with an initial capital of ₹100 crore.

- Ans**
- 1. Only I
 - 2. Only II and III
 - 3. Only II
 - 4. Only I and III

Question ID : 264330141455
Option 1 ID : 264330554155
Option 2 ID : 264330554158
Option 3 ID : 264330554156
Option 4 ID : 264330554157

Status : Answered
Chosen Option : 4

- Q.2** The Indian Vice President is elected by an electoral college comprising members of _____.

- Ans**
- 1. Rajya Sabha, Lok Sabha and State Legislative Council
 - 2. Lok Sabha and State Legislature
 - 3. Rajya Sabha and State Legislative Assembly
 - 4. both the houses of Parliament

Question ID : 264330110598
Option 1 ID : 264330434672
Option 2 ID : 264330434670
Option 3 ID : 264330434671
Option 4 ID : 264330434669

Status : Answered
Chosen Option : 1

- Q.3** Which of the following is NOT a fundamental duty?

- Ans**
- 1. To safeguard public property
 - 2. To value and preserve the rich heritage of the country's composite culture
 - 3. To promote cooperative society
 - 4. To uphold and protect the sovereignty, unity and integrity of India

Question ID : 264330111515
Option 1 ID : 264330438145
Option 2 ID : 264330438147
Option 3 ID : 264330438148
Option 4 ID : 264330438146

Status : Answered
Chosen Option : 3

Q.4 How many officials are there for looking after each Kabaddi match?

Ans 1. 6

2. 2

3. 3

4. 5

Question ID : 264330113772

Option 1 ID : 264330447175

Option 2 ID : 264330447176

Option 3 ID : 264330447174

Option 4 ID : 264330447173

Status : Not Answered

Chosen Option : --

Q.5 In which town of India did James Prinsep conduct the census in 1824?

Ans 1. Banaras

2. Allahabad

3. Bombay

4. Calcutta

Question ID : 264330130586

Option 1 ID : 264330511455

Option 2 ID : 264330511458

Option 3 ID : 264330511457

Option 4 ID : 264330511456

Status : Answered

Chosen Option : 2

Q.6 Where is the National Flag hoisted by the Prime Minister on every Independence Day?

Ans 1. Red Fort

2. Parliament House

3. India Gate

4. Gateway of India

Question ID : 264330106214

Option 1 ID : 264330417157

Option 2 ID : 264330417158

Option 3 ID : 264330417160

Option 4 ID : 264330417159

Status : Answered

Chosen Option : 1

Q.7 Which of the following states is associated with the devotional folk dance 'Gambhira'?

Ans 1. Rajasthan

2. Bihar

3. Odisha

4. West Bengal

Question ID : 264330106188

Option 1 ID : 264330417055

Option 2 ID : 264330417054

Option 3 ID : 264330417053

Option 4 ID : 264330417056

Status : Answered

Chosen Option : 4

Q.8 Murad Ali is a well-known _____ player.

- Ans 1. guitar
 2. sarangi
 3. tabla
 4. flute

Question ID : 264330111961
Option 1 ID : 264330439929
Option 2 ID : 264330439932
Option 3 ID : 264330439931
Option 4 ID : 264330439930
Status : Answered
Chosen Option : 3

Q.9 Who among the following was the first Indian to conduct a major British orchestra in 1961? He was the Israel Philharmonic Orchestra's 'Music Director for Life'.

- Ans 1. Zubin Mehta
 2. Dr. Lakshminarayana Subramaniam
 3. Ilaiyaraaja
 4. AR Rahman

Question ID : 264330113235
Option 1 ID : 264330445028
Option 2 ID : 264330445027
Option 3 ID : 264330445026
Option 4 ID : 264330445025
Status : Answered
Chosen Option : 4

Q.10 Which of the following is NOT an independent constitutional body according to the Indian Constitution?

- Ans 1. UPSC
 2. NITI Aayog
 3. Election Commission
 4. State Public Service Commission

Question ID : 264330173471
Option 1 ID : 264330680364
Option 2 ID : 264330680366
Option 3 ID : 264330680363
Option 4 ID : 264330680365
Status : Answered
Chosen Option : 2

Q.11 Which of the following Articles of the Indian Constitution is related with organisation of village panchayats?

- Ans 1. Article40
 2. Article38
 3. Article39
 4. Article 37

Question ID : 264330180056
Option 1 ID : 264330706210
Option 2 ID : 264330706208
Option 3 ID : 264330706209
Option 4 ID : 264330706207
Status : Answered
Chosen Option : 1

Q.12 The 'Shiksha Karmi' initiative and the 'Lok Jumbish' programme are schemes that helped increase the literacy rate of which state in India?

- Ans**
- 1. Madhya Pradesh
 - 2. Gujarat
 - 3. Mizoram
 - 4. Rajasthan

Question ID : 264330130595
Option 1 ID : 264330511493
Option 2 ID : 264330511492
Option 3 ID : 264330511491
Option 4 ID : 264330511494
Status : Answered
Chosen Option : 3

Q.13 The main objective of which of the following schemes is to support sustainable production in the agriculture sector by providing financial assistance to farmers suffering crop loss/damage arising out of unforeseen events?

- Ans**
- 1. Pradhan Mantri Fasal Bima Yojana
 - 2. Paramparagat Krishi Vikas Yojana
 - 3. Pradhan Mantri Krishi Sinchai Yojana
 - 4. Gramin Bhandaran Yojana

Question ID : 264330120360
Option 1 ID : 264330471693
Option 2 ID : 264330471694
Option 3 ID : 264330471692
Option 4 ID : 264330471691
Status : Answered
Chosen Option : 1

Q.14 Who described Archimedes' method of finding the specific gravity of substances using a balance in the treatise 'The Little Balance'?

- Ans**
- 1. Galileo Galilei
 - 2. Michael Faraday
 - 3. Daniel Bernoulli
 - 4. Albert Einstein

Question ID : 264330177866
Option 1 ID : 264330697552
Option 2 ID : 264330697553
Option 3 ID : 264330697554
Option 4 ID : 264330697551
Status : Answered
Chosen Option : 3

Q.15 Sultan Muhammad Bin Tughluq appointed _____, a wine distiller, to a high administrative post in the Delhi Sultanate.

- Ans
- 1. Aziz Khummar
 - 2. Manka Tabbakh
 - 3. Ladha
 - 4. Firuz Hajjam

Question ID : 264330182262
Option 1 ID : 264330714874
Option 2 ID : 264330714872
Option 3 ID : 264330714873
Option 4 ID : 264330714871
Status : Not Answered
Chosen Option : --

Q.16 The Rajya Sabha should consist of NOT more than _____ members.

- Ans
- 1. 240
 - 2. 245
 - 3. 250
 - 4. 238

Question ID : 264330120180
Option 1 ID : 264330470978
Option 2 ID : 264330470976
Option 3 ID : 264330470975
Option 4 ID : 264330470977
Status : Answered
Chosen Option : 3

Q.17 In which of the following years was Subash Chandra Bose appointed as the President of the Indian Independence League?

- Ans
- 1. 1941
 - 2. 1944
 - 3. 1942
 - 4. 1943

Question ID : 264330118607
Option 1 ID : 264330465682
Option 2 ID : 264330465679
Option 3 ID : 264330465681
Option 4 ID : 264330465680
Status : Answered
Chosen Option : 3

Q.18 Which thermostable enzyme hydrolyses starch during the cooking of sweet potatoes?

- Ans
- 1. Pectinase
 - 2. Exocellulases
 - 3. β -amylase
 - 4. Lipase

Question ID : 264330131006
Option 1 ID : 264330513138
Option 2 ID : 264330513137
Option 3 ID : 264330513135
Option 4 ID : 264330513136
Status : Not Answered
Chosen Option : --

Q.19 Harmika is a _____ Buddhist railing, from which a shaft rises and that holds the imperial umbrella.

- Ans 1. square
 2. rectangular
 3. cylindrical
 4. circular

Question ID : 264330106356
Option 1 ID : 264330417727
Option 2 ID : 264330417728
Option 3 ID : 264330417725
Option 4 ID : 264330417726
Status : Answered
Chosen Option : 4

Q.20 Which of the following is causative factor for oral cancer?

- Ans 1. Spicy food
 2. Tobacco
 3. Sugar
 4. Excess salt

Question ID : 264330118274
Option 1 ID : 264330464911
Option 2 ID : 264330464913
Option 3 ID : 264330464912
Option 4 ID : 264330464914
Status : Answered
Chosen Option : 2

Q.21 How many types of ministers are there in the Council of Ministers?

- Ans 1. 5
 2. 6
 3. 3
 4. 4

Question ID : 264330173517
Option 1 ID : 264330680549
Option 2 ID : 264330680550
Option 3 ID : 264330680547
Option 4 ID : 264330680548
Status : Answered
Chosen Option : 3

Q.22 Who among the following is an American tennis player who wrote 'Open: An autobiography'?

- Ans 1. Pete Sampras
 2. Rod Laver
 3. Andre Agassi
 4. Ivan Lendl

Question ID : 26433086907
Option 1 ID : 264330341269
Option 2 ID : 264330341271
Option 3 ID : 264330341270
Option 4 ID : 264330341272
Status : Not Answered
Chosen Option : --

Q.23 Which of the following is an essential feature of the Green Revolution?

- Ans
- 1. Increase in multi-fold international trade.
 - 2. Increase in the role and responsibility of the government.
 - 3. Good quality labour can increase industrial productivity.
 - 4. HYV seeds have led to a substantial rise in crop productivity.

Question ID : 264330174152
Option 1 ID : 264330683049
Option 2 ID : 264330683050
Option 3 ID : 264330683047
Option 4 ID : 264330683048
Status : Answered
Chosen Option : 4

Q.24 The 'slash and burn' agriculture is known as _____ in Rajasthan state.

- Ans
- 1. Waltre
 - 2. Roca
 - 3. Dipa
 - 4. Podu

Question ID : 264330181232
Option 1 ID : 264330710854
Option 2 ID : 264330710853
Option 3 ID : 264330710851
Option 4 ID : 264330710852
Status : Answered
Chosen Option : 1

Q.25 Harshavardhana, the ruler of Kannauj in 7th century CE, was the king of which of the following dynasties?

- Ans
- 1. Pushyabhuti
 - 2. Vakataka
 - 3. Chalukya
 - 4. Maukhari

Question ID : 264330183234
Option 1 ID : 264330718669
Option 2 ID : 264330718671
Option 3 ID : 264330718668
Option 4 ID : 264330718670
Status : Answered
Chosen Option : 1

Q.26 The Thanksgiving Festival of Nawala that is dedicated to Lord Shiva is majorly celebrated in which city of Himachal Pradesh?

- Ans
- 1. Chamba
 - 2. Dharamshala
 - 3. Shimla
 - 4. Kangra

Question ID : 264330132413
Option 1 ID : 264330518749
Option 2 ID : 264330518750
Option 3 ID : 264330518748
Option 4 ID : 264330518747
Status : Not Answered
Chosen Option : --

Q.27 In India, the Young Men's Christian Association (YMCA) at _____ introduced basketball for the first time.

- Ans 1. Kolkata
 2. Ranchi
 3. Mumbai
 4. Jamshedpur

Question ID : 264330119274
Option 1 ID : 264330467384
Option 2 ID : 264330467385
Option 3 ID : 264330467386
Option 4 ID : 264330467383
Status : Not Answered
Chosen Option : --

Q.28 In which year did the sepoy revolt take place in Vellore?

- Ans 1. 1795 CE
 2. 1824 CE
 3. 1806 CE
 4. 1856 CE

Question ID : 264330114042
Option 1 ID : 264330448253
Option 2 ID : 264330448256
Option 3 ID : 264330448254
Option 4 ID : 264330448255
Status : Answered
Chosen Option : 4

Q.29 How many total jumps are there in a 3000 m steeplechase race?

- Ans 1. 36
 2. 33
 3. 35
 4. 34

Question ID : 264330110392
Option 1 ID : 264330433847
Option 2 ID : 264330433845
Option 3 ID : 264330433846
Option 4 ID : 264330433848
Status : Not Answered
Chosen Option : --

Q.30 Which of the following has NOT occurred after the liberalisation of economic policies under the New Economic Policies (NEP) in 1991?

- Ans 1. Increase in India's share of exports in world trade
 2. Significant increase in India's foreign exchange reserves
 3. Increase in inflows from foreign direct investment
 4. A massive increase in the share of agriculture in India's gross domestic product

Question ID : 264330111599
Option 1 ID : 264330438484
Option 2 ID : 264330438481
Option 3 ID : 264330438482
Option 4 ID : 264330438483
Status : Answered
Chosen Option : 4

Q.31 Microfinance programmes were first created by Nobel prize winning Economist Muhammad Yunus in what decade?

- Ans
- 1. 1960s
 - 2. 1990s
 - 3. 1970s
 - 4. 1950s

Question ID : 264330117570
Option 1 ID : 264330462306
Option 2 ID : 264330462308
Option 3 ID : 264330462307
Option 4 ID : 264330462305
Status : Answered
Chosen Option : 2

Q.32 Birsa Munda hockey stadium is situated in _____ .

- Ans
- 1. Jharkhand
 - 2. Chhattisgarh
 - 3. Haryana
 - 4. Odisha

Question ID : 264330132540
Option 1 ID : 264330519257
Option 2 ID : 264330519256
Option 3 ID : 264330519258
Option 4 ID : 264330519255
Status : Answered
Chosen Option : 4

Q.33 Who among the following was the founder and director of 'Darpana Academy of Performing Arts' in Ahmedabad that trains students in dance, drama, music and puppetry?

- Ans
- 1. Mrinalini Sarabhai
 - 2. Padma Subrahmanyam
 - 3. Shovana Narayan
 - 4. Sonal Mansingh

Question ID : 264330111977
Option 1 ID : 264330439993
Option 2 ID : 264330439996
Option 3 ID : 264330439994
Option 4 ID : 264330439995
Status : Answered
Chosen Option : 1

Q.34 Which Article of the Constitution of India says that Directive Principles of State Policy are fundamental in the governance of the country and it shall be the duty of the state to apply these in making laws?

- Ans
- 1. Article 39
 - 2. Article 38
 - 3. Article 35
 - 4. Article 37

Question ID : 264330130452
Option 1 ID : 264330510922
Option 2 ID : 264330510921
Option 3 ID : 264330510919
Option 4 ID : 264330510920
Status : Answered
Chosen Option : 4

Q.35 As per Census 2011, which of the following states has the highest percentage of Scheduled Tribe population in the country?

- Ans
- 1. Madhya Pradesh
 - 2. Nagaland
 - 3. Uttar Pradesh
 - 4. Mizoram

Question ID : 264330183019
Option 1 ID : 264330717811
Option 2 ID : 264330717809
Option 3 ID : 264330717810
Option 4 ID : 264330717808
Status : Answered
Chosen Option : 1

Q.36 The Tungabhadra, the Koyana and the Bhima are major tributaries of which Peninsular river?

- Ans
- 1. Krishna
 - 2. Godavari
 - 3. Narmada
 - 4. Kaveri

Question ID : 264330176012
Option 1 ID : 264330690343
Option 2 ID : 264330690344
Option 3 ID : 264330690345
Option 4 ID : 264330690346
Status : Answered
Chosen Option : 2

Q.37 At which place did the Congress declare the resolution of Purna Swaraj in its session in 1929?

- Ans
- 1. Bombay
 - 2. Karachi
 - 3. Lahore
 - 4. Madras

Question ID : 264330123745
Option 1 ID : 264330485016
Option 2 ID : 264330485015
Option 3 ID : 264330485018
Option 4 ID : 264330485017
Status : Answered
Chosen Option : 3

Q.38 What is the range of mesosphere?

- Ans
- 1. 0-10 km
 - 2. 10-30 km
 - 3. 50-100 km
 - 4. 50-80 km

Question ID : 264330120082
Option 1 ID : 264330470583
Option 2 ID : 264330470584
Option 3 ID : 264330470586
Option 4 ID : 264330470585
Status : Answered
Chosen Option : 3

Q.39 The branch of geology exploring how rocks bend in reaction to forces within the Earth's interior is called:

- Ans
- 1. basic geology
 - 2. mountain geology
 - 3. rock geology
 - 4. structural geology

Question ID : 264330131815
Option 1 ID : 264330516361
Option 2 ID : 264330516362
Option 3 ID : 264330516360
Option 4 ID : 264330516359
Status : Answered
Chosen Option : 4

Q.40 Shri Narayana Guru, who belonged to the Ezhava caste, started his social reform movement in the modern state of:

- Ans
- 1. Maharashtra
 - 2. Odisha
 - 3. Punjab
 - 4. Kerala

Question ID : 264330119747
Option 1 ID : 264330469264
Option 2 ID : 264330469265
Option 3 ID : 264330469266
Option 4 ID : 264330469263
Status : Not Answered
Chosen Option : --

Q.41 The term 'Takshan' in the Vedic period was used for _____.

- Ans 1. Carpenter
 2. Kulapa
 3. Senani
 4. Rathakara

Question ID : 264330117681
Option 1 ID : 264330462720
Option 2 ID : 264330462722
Option 3 ID : 264330462719
Option 4 ID : 264330462721
Status : Not Answered
Chosen Option : --

Q.42 General Agreement on Tariffs and Trade was formalised in the year:

- Ans 1. 1991
 2. 1947
 3. 2002
 4. 1995

Question ID : 264330111580
Option 1 ID : 264330438406
Option 2 ID : 264330438405
Option 3 ID : 264330438408
Option 4 ID : 264330438407
Status : Answered
Chosen Option : 3

Q.43 Identify the FALSE statement(s).

- A. In the context of Green Revolution HYV stands for Hybrid Yielding Variety.
B. Fallowing is a practice of leaving land uncultivated for some time for it to regain its fertility.

- Ans 1. Only B
 2. Only A
 3. Neither A nor B
 4. Both A and B

Question ID : 264330109114
Option 1 ID : 264330428734
Option 2 ID : 264330428733
Option 3 ID : 264330428736
Option 4 ID : 264330428735
Status : Answered
Chosen Option : 2

Q.44 Who is the author of 'Half Girlfriend and One Indian Girl'?

- Ans 1. Amit Chaudhuri
 2. Kiran Desai
 3. Jeet Thayil
 4. Chetan Bhagat

Question ID : 26433071708
Option 1 ID : 264330281258
Option 2 ID : 264330281257
Option 3 ID : 264330281256
Option 4 ID : 264330281259
Status : Answered
Chosen Option : 4

Q.45 Muhammad bin Tughlaq appointed Ibn Battuta to the post of the _____ in Delhi.

- Ans 1. Amalguzar
 2. Qazi
 3. Shiqdar
 4. Kotwal

Question ID : 264330111376
Option 1 ID : 264330437590
Option 2 ID : 264330437592
Option 3 ID : 264330437591
Option 4 ID : 264330437589
Status : Answered
Chosen Option : 2

Q.46 Beti Bachao, Beti Padhao Yojana is a campaign under the Government of India that was established for generating awareness and improving the efficiency of the welfare services intended for _____ in India.

- Ans 1. boys
 2. girls
 3. children
 4. both boys and girls

Question ID : 264330110011
Option 1 ID : 264330432321
Option 2 ID : 264330432322
Option 3 ID : 264330432324
Option 4 ID : 264330432323
Status : Answered
Chosen Option : 2

Q.47 Nongkrem and Laho are the popular dances of which of the following states?

- Ans 1. Manipur
 2. Arunachal Pradesh
 3. Meghalaya
 4. Assam

Question ID : 264330110417
Option 1 ID : 264330433948
Option 2 ID : 264330433946
Option 3 ID : 264330433945
Option 4 ID : 264330433947
Status : Answered
Chosen Option : 1

Q.48 Fugdi dance is commonly performed during which of these festivals?

- Ans 1. Ganesh Chaturthi
 2. Holi
 3. Navratri
 4. Deepawali

Question ID : 264330109289
Option 1 ID : 264330429435
Option 2 ID : 264330429434
Option 3 ID : 264330429433
Option 4 ID : 264330429436
Status : Answered
Chosen Option : 2

Q.49 The Five Kingdom Classification of living organism was first proposed by:

- Ans 1. James A White
 2. Charles Darwin
 3. RH Whittaker
 4. Aristotle

Question ID : 264330173660
Option 1 ID : 264330681122
Option 2 ID : 264330681121
Option 3 ID : 264330681120
Option 4 ID : 264330681119
Status : Answered
Chosen Option : 3

Q.50 Humayun Tomb, which is located in _____ is an example of Mughal architecture inspired by Persian architecture.

- Ans 1. Bengaluru
 2. Hyderabad
 3. Jaipur
 4. Delhi

Question ID : 264330106249
Option 1 ID : 264330417300
Option 2 ID : 264330417298
Option 3 ID : 264330417297
Option 4 ID : 264330417299
Status : Answered
Chosen Option : 4

Section : Reasoning

Q.1 Select the option that is related to the fifth letter cluster in the same way as the second letter cluster is related to the first letter cluster and the fourth letter cluster is related to the third letter cluster.

RJCZ : KPVF :: DJVE : WPOK :: PGCS : ?

- Ans 1. MCJA
 2. YGBE
 3. IMVY
 4. LKSP

Question ID : 26433074690
Option 1 ID : 264330292851
Option 2 ID : 264330292850
Option 3 ID : 264330292848
Option 4 ID : 264330292849
Status : Answered
Chosen Option : 3

Q.2 Select the correct mirror image of the given figure when the mirror is placed at MN as shown below.



Ans

✓ 1. Qorvsjlvyn

✗ 2. Qorhvnjlvyn

✗ 3. Qorvsjlvyn

✗ 4. Qorhvnjlvyn

Question ID : 264330117835

Option 1 ID : 264330463155

Option 2 ID : 264330463158

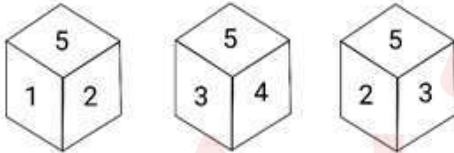
Option 3 ID : 264330463157

Option 4 ID : 264330463156

Status : Answered

Chosen Option : 1

Q.3 Three different positions of the same dice are shown. Find the number on the face opposite the face showing '2'.



Ans

✗ 1. 3

✓ 2. 4

✗ 3. 1

✗ 4. 5

Question ID : 264330116961

Option 1 ID : 264330459928

Option 2 ID : 264330459926

Option 3 ID : 264330459927

Option 4 ID : 264330459925

Status : Answered

Chosen Option : 2

Q.4 Two statements are given, followed by two conclusions numbered I and II. Assuming the statements to be true, even if they seem to be at variance with commonly known facts, decide which of the conclusions logically follow(s) from the statements.

Statements:

All surveys are research.

Some surveys are books.

Conclusions:

I. Some research are surveys.

II. All books are research.

- Ans
- 1. Only Conclusion II follows.
 - 2. Only Conclusion I follows.
 - 3. Both Conclusions I and II follow.
 - 4. Neither Conclusion I nor II follows.

Question ID : 26433081679

Option 1 ID : 264330320550

Option 2 ID : 264330320549

Option 3 ID : 264330320551

Option 4 ID : 264330320552

Status : Answered

Chosen Option : 2

Q.5 Select the correct mirror image of the given figure when the mirror is placed at MN as shown below.

P e N t a 2 4

M ————— N

- Ans
- 1. b e N f g 5 4
 - 2. b e N f g 5 4
 - 3. b e N f g 2 4
 - 4. p e N f g 5 4

Question ID : 26433080791

Option 1 ID : 264330317098

Option 2 ID : 264330317097

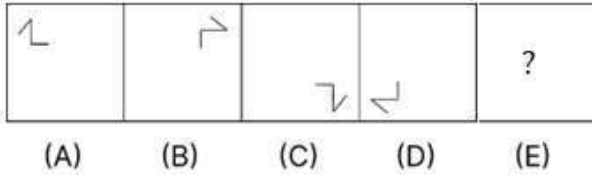
Option 3 ID : 264330317100

Option 4 ID : 264330317099

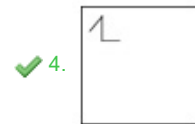
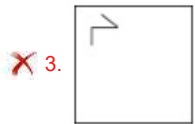
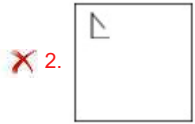
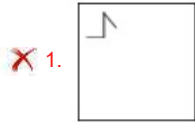
Status : Answered

Chosen Option : 2

Q.6 Given below is a series of figures – A, B, C and D which follow a particular pattern. Which of the given option figures should come in place of E to continue the series?



Ans



Question ID : 26433011288

Option 1 ID : 264330437238

Option 2 ID : 264330437239

Option 3 ID : 264330437240

Option 4 ID : 264330437237

Status : Answered

Chosen Option : 4

Q.7 Select the correct mirror image of the given combination when the mirror is placed at 'PQ' as shown below.



Ans



Question ID : 264330129810

Option 1 ID : 264330508471

Option 2 ID : 264330508472

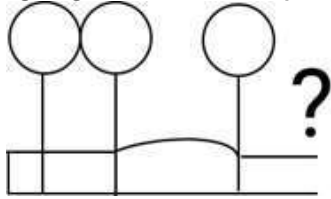
Option 3 ID : 264330508474

Option 4 ID : 264330508473

Status : Answered

Chosen Option : 1

Q.8 Select the figure from the given options that will replace the question mark (?) in the figure given below and complete the pattern.



Ans

- ✗ 1.
- ✗ 2.
- ✓ 3.
- ✗ 4.

Question ID : 264330111709

Option 1 ID : 264330438922

Option 2 ID : 264330438924

Option 3 ID : 264330438923

Option 4 ID : 264330438921

Status : Answered

Chosen Option : 3

Q.9 Which two signs should be interchanged to make the given equation correct?

$$264 \div 4 \times 7 = 87 - 370 + 5$$

Ans ✓ 1. = and -

✗ 2. = and ×

✗ 3. = and +

✗ 4. = and ÷

Question ID : 26433085737

Option 1 ID : 264330336651

Option 2 ID : 264330336650

Option 3 ID : 264330336649

Option 4 ID : 264330336652

Status : Answered

Chosen Option : 1

Q.10 Select the correct mirror image of the given combination when the mirror is placed at 'XY' as shown below.

CAPITAL246



- Ans
- 1. 642LATIPAC
 - 2. 9PITVL246
 - 3. CAVITL246
 - 4. 9PITVL246

Question ID : 264330129691

Option 1 ID : 264330508133

Option 2 ID : 264330508132

Option 3 ID : 264330508130

Option 4 ID : 264330508131

Status : Answered

Chosen Option : 4

Q.11 In a certain code language, 'BLESSING' is written as 'ELJQQFJZ' and 'OVERNIGHT' is written as 'RFEJLPFTP'. How will 'HAMPER' be written in that language?

- Ans
- 1. QFNNBJ
 - 2. FBKNFP
 - 3. PFNKBF
 - 4. TBORJE

Question ID : 26433092580

Option 1 ID : 264330363610

Option 2 ID : 264330363609

Option 3 ID : 264330363611

Option 4 ID : 264330363612

Status : Answered

Chosen Option : 3

Q.12 Select the correct combination of mathematical signs to sequentially replace the * signs and to balance the given equation.

$$98 * 49 * 7 * 74 * 55 * 3$$

- Ans
- 1. +, -, +, x, =
 - 2. -, +, +, =, x
 - 3. -, +, +, x, =
 - 4. +, -, x, +, =

Question ID : 26433085714

Option 1 ID : 264330336557

Option 2 ID : 264330336558

Option 3 ID : 264330336559

Option 4 ID : 264330336560

Status : Answered

Chosen Option : 2

Q.13 Three different positions of the same dice are shown. Select the symbol that will be on the face opposite to the face showing 'L'.



- Ans
- 1. %
 - 2. @
 - 3. &
 - 4. #

Question ID : 264330117421

Option 1 ID : 264330461726

Option 2 ID : 264330461725

Option 3 ID : 264330461728

Option 4 ID : 264330461727

Status : Answered

Chosen Option : 4

Q.14 Select the option that is related to the fourth number in the same way as the first number is related to the second number and the fifth number is related to the sixth number.

1260 : 1890 :: ? : 2160 :: 1882 : 2823

- Ans
- 1. 1280
 - 2. 1440
 - 3. 1480
 - 4. 1860

Question ID : 26433052021

Option 1 ID : 264330203387

Option 2 ID : 264330203388

Option 3 ID : 264330203386

Option 4 ID : 264330203389

Status : Answered

Chosen Option : 2

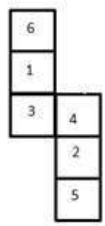
Q.15 Select the correct mirror image of the given figure when the mirror is placed at PQ as shown below.



- Ans
- 1. W 7 9 2 R u B
 - 2. W 7 9 2 R u B
 - 3. W 7 9 2 R u B
 - 4. W 7 9 2 R u B

Question ID : 26433080773
 Option 1 ID : 264330317027
 Option 2 ID : 264330317028
 Option 3 ID : 264330317025
 Option 4 ID : 264330317026
 Status : Answered
 Chosen Option : 4

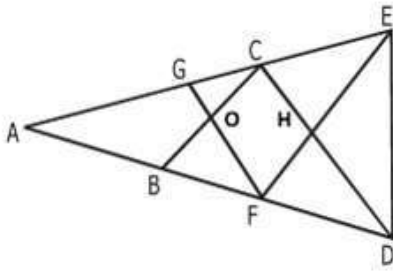
Q.16 When the given figure is folded to form a cube, then which face will be on the opposite plane of 4?



- Ans
- 1. 6
 - 2. 5
 - 3. 1
 - 4. 3

Question ID : 264330110549
 Option 1 ID : 264330434473
 Option 2 ID : 264330434474
 Option 3 ID : 264330434475
 Option 4 ID : 264330434476
 Status : Answered
 Chosen Option : 2

Q.17 How many triangles are there in the given figure?



Ans 1. 14

2. 13

3. 17

4. 20

Question ID : 26433091706

Option 1 ID : 264330360190

Option 2 ID : 264330360189

Option 3 ID : 264330360191

Option 4 ID : 264330360192

Status : Answered

Chosen Option : 3

Q.18 Which of the following letter clusters will replace the question mark (?) in the given series to make it logically complete?
IKN, GHL, EEJ, CBH, ?

Ans 1. AZF

2. AXE

3. AYF

4. AYE

Question ID : 264330102228

Option 1 ID : 264330401377

Option 2 ID : 264330401380

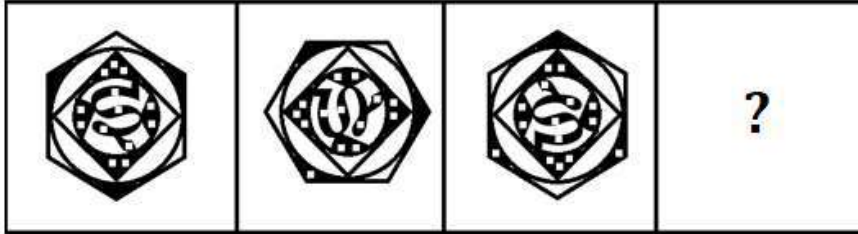
Option 3 ID : 264330401379

Option 4 ID : 264330401378

Status : Answered

Chosen Option : 1

Q.19 Select the figure that will come next in the following figure series.



Ans

✗ 1.



✗ 2.



✓ 3.



✗ 4.



Question ID : 264330129650

Option 1 ID : 264330507969

Option 2 ID : 264330507966

Option 3 ID : 264330507967

Option 4 ID : 264330507968

Status : Answered

Chosen Option : 3

Q.20 Which figure should replace the question mark (?) if the series were to be continued?

S	C	C	S	V	C	C	V	
X	=	9	V	X	=	X	=	S
V		↑	↑	9	9	↑	↑	S

Ans

✗ 1.

V	C
=	9
S	↑

✗ 2.

V	C
X	=
S	↑

✓ 3.

9	C
X	=
S	↑

✗ 4.

V	=
C	9
S	↑

Question ID : 264330130794

Option 1 ID : 264330512289

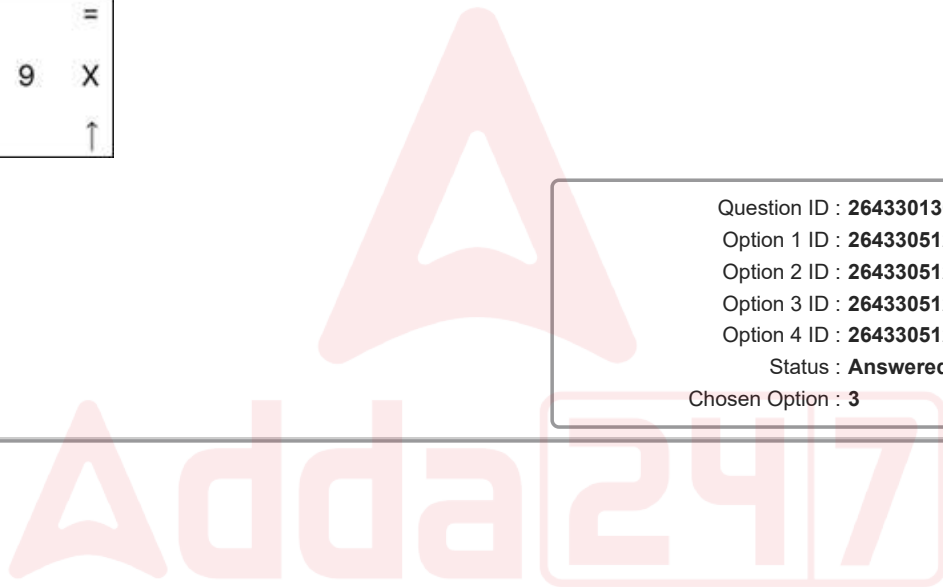
Option 2 ID : 264330512290

Option 3 ID : 264330512288

Option 4 ID : 264330512287

Status : Answered

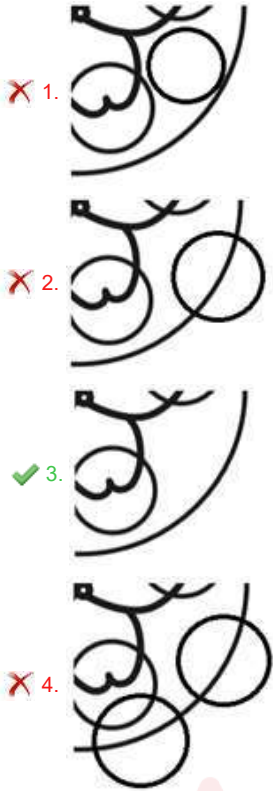
Chosen Option : 3



Q.21 Which of the following option figures will complete the pattern in the figure given below?



Ans



Question ID : 26433080616

Option 1 ID : 264330316400

Option 2 ID : 264330316398

Option 3 ID : 264330316397

Option 4 ID : 264330316399

Status : Answered

Chosen Option : 3

Q.22 Select the number from among the given options that can replace the question mark (?) in the following series.

10, 18, 42, 114, 330, ?

Ans 1. 978

2. 876

3. 678

4. 545

Question ID : 264330109755

Option 1 ID : 264330431299

Option 2 ID : 264330431300

Option 3 ID : 264330431298

Option 4 ID : 264330431297

Status : Answered

Chosen Option : 1

Q.23 L, M, N, O, P, R and S are sitting in a straight row, facing north. O is exactly between L and N. M is exactly between S and P. Only two people sit to the left of O. Who among the following sits at the extreme left end of the row?

- Ans
- 1. L
 - 2. S
 - 3. P
 - 4. R

Question ID : 26433087018

Option 1 ID : 264330341716

Option 2 ID : 264330341714

Option 3 ID : 264330341715

Option 4 ID : 264330341713

Status : Answered

Chosen Option : 4

Q.24 Select the set in which the numbers are related in the same way as are the numbers of the following sets.

(NOTE : Operations should be performed on the whole numbers, without breaking down the numbers into its constituent digits. E.g. 13 – Operations on 13 such as adding /deleting /multiplying etc. to 13 can be performed. Breaking down 13 into 1 and 3 and then performing mathematical operations on 1 and 3 is not allowed.)

(63, 9, 27)

(105, 15, 45)

- Ans
- 1. (149, 21, 63)
 - 2. (149, 21, 65)
 - 3. (147, 21, 65)
 - 4. (147, 21, 63)

Question ID : 26433097193

Option 1 ID : 264330381469

Option 2 ID : 264330381470

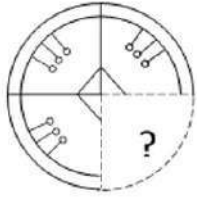
Option 3 ID : 264330381471

Option 4 ID : 264330381472

Status : Answered

Chosen Option : 4

Q.25 Select the option figure that will replace the question mark (?) in the figure given below to complete the pattern.



Ans

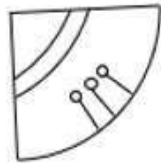
✓ 1.



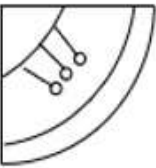
✗ 2.



✗ 3.



✗ 4.



Question ID : 26433085565

Option 1 ID : 264330335963

Option 2 ID : 264330335964

Option 3 ID : 264330335962

Option 4 ID : 264330335961

Status : Answered

Chosen Option : 1

Section : Numerical Ability

Q.1 Let y be 20% more than x . If the same number is added to x and y , then x becomes $\frac{3}{2}$ times its previous value. Now the new value of y is ____ times its previous value.

- Ans
- 1. $\frac{21}{17}$
 - 2. $\frac{12}{17}$
 - 3. $\frac{19}{17}$
 - 4. $\frac{17}{12}$

Question ID : 264330112072
Option 1 ID : 264330440375
Option 2 ID : 264330440376
Option 3 ID : 264330440374
Option 4 ID : 264330440373
Status : Answered
Chosen Option : 4

Q.2 A person buys a car at 25% discount on the marked price and sells it at 20% higher than the marked price. What is the actual gain percentage?

- Ans
- 1. 40%
 - 2. 60%
 - 3. 25%
 - 4. 20%

Question ID : 264330119332
Option 1 ID : 264330467617
Option 2 ID : 264330467618
Option 3 ID : 264330467615
Option 4 ID : 264330467616
Status : Answered
Chosen Option : 2

Q.3 A sum of ₹9,500 becomes ₹11,704.95 in 2 years at compound interest. What is the rate of interest?

- Ans
- 1. 11%
 - 2. 7%
 - 3. 9%
 - 4. 10%

Question ID : 264330104523
Option 1 ID : 264330410396
Option 2 ID : 264330410395
Option 3 ID : 264330410394
Option 4 ID : 264330410393
Status : Answered
Chosen Option : 1

Q.4 If $3x : y : 2z = 6 : 5 : 4$ and $5x - 3y + 4z = 48$, then find the value of $2z$.

- Ans 1. 64
 2. 48
 3. 60
 4. 54

Question ID : 264330130093
Option 1 ID : 264330509606
Option 2 ID : 264330509603
Option 3 ID : 264330509605
Option 4 ID : 264330509604
Status : Answered
Chosen Option : 1

Q.5 The simple Interest becomes $\frac{3}{4}$ of the sum invested in 15 years. What is the rate of interest if the sum invested is ₹20,000?

- Ans 1. 5%
 2. 4%
 3. 6%
 4. 7%

Question ID : 264330133281
Option 1 ID : 264330522173
Option 2 ID : 264330522171
Option 3 ID : 264330522172
Option 4 ID : 264330522174
Status : Answered
Chosen Option : 1

Q.6 The area of a triangle whose sides are of lengths 5 cm, 6 cm and 8 cm is:

- Ans 1. 10.92 cm²
 2. 18.92 cm²
 3. 16.89 cm²
 4. 14.98 cm²

Question ID : 264330104540
Option 1 ID : 264330410464
Option 2 ID : 264330410462
Option 3 ID : 264330410461
Option 4 ID : 264330410463
Status : Answered
Chosen Option : 4

Q.7 A has completed two-third of a job in 8 days, and B completes the rest of the job in 20 days. In how many days can they together complete the job?

- Ans
- 1. 20
 - 2. 12
 - 3. 10
 - 4. 8

Question ID : 264330104535
Option 1 ID : 264330410441
Option 2 ID : 264330410444
Option 3 ID : 264330410443
Option 4 ID : 264330410442
Status : Answered
Chosen Option : 3

Q.8 The radius and height of a cone are 4 cm and 3 cm, respectively. Find the volume of the cone.

- Ans
- 1. $12\pi \text{ cm}^3$
 - 2. $16\pi \text{ cm}^3$
 - 3. $8\pi \text{ cm}^3$
 - 4. $48\pi \text{ cm}^3$

Question ID : 264330111496
Option 1 ID : 264330438070
Option 2 ID : 264330438071
Option 3 ID : 264330438069
Option 4 ID : 264330438072
Status : Answered
Chosen Option : 2

Q.9 If Ram gets a discount of 12% on the marked price of a fan, he saves ₹600. How much did Ram pay for the fan?

- Ans
- 1. ₹4,400
 - 2. ₹3,300
 - 3. ₹3,600
 - 4. ₹4,600

Question ID : 264330130088
Option 1 ID : 264330509584
Option 2 ID : 264330509583
Option 3 ID : 264330509586
Option 4 ID : 264330509585
Status : Answered
Chosen Option : 1

Q.10 Twin prime numbers are the prime numbers whose difference is always equal to 2. The number of twin primes between 35 and 100 is:

- Ans
- 1. 3
 - 2. 4
 - 3. 1
 - 4. 2

Question ID : 264330104387
Option 1 ID : 264330409851
Option 2 ID : 264330409849
Option 3 ID : 264330409850
Option 4 ID : 264330409852
Status : Answered
Chosen Option : 1

Q.11 A 300 m long train crosses a platform which is five times of its length, in 7 minutes 40 sec. What is the speed of the train?

- Ans
- 1. $2\frac{19}{23}$ m/s
 - 2. $1\frac{17}{23}$ m/s
 - 3. $3\frac{21}{23}$ m/s
 - 4. $2\frac{17}{23}$ m/s

Question ID : 264330122991
Option 1 ID : 264330482027
Option 2 ID : 264330482028
Option 3 ID : 264330482030
Option 4 ID : 264330482029
Status : Answered
Chosen Option : 3

Q.12 Three numbers which are co-prime to each other are such that the product of the first two is 391 and that of the last two is 943. Find the middle number.

- Ans
- 1. 17
 - 2. 23
 - 3. 41
 - 4. 19

Question ID : 264330111444
Option 1 ID : 264330437861
Option 2 ID : 264330437863
Option 3 ID : 264330437862
Option 4 ID : 264330437864
Status : Answered
Chosen Option : 2

Q.13 What is the average of the following numbers?

4, 3, 7, -3, 0, -5, -7, 5, -6, 0, -4, 6

- Ans
- 1. 4
 - 2. 2
 - 3. 1
 - 4. 0

Question ID : 264330126093
Option 1 ID : 264330494047
Option 2 ID : 264330494046
Option 3 ID : 264330494045
Option 4 ID : 264330494044
Status : Answered
Chosen Option : 4

Q.14 What is the smallest number which, when divided by 15, 17 and 19, leaves remainder 4, 6 and 8, respectively?

- Ans
- 1. 4845
 - 2. 4548
 - 3. 4832
 - 4. 4834

Question ID : 264330103915
Option 1 ID : 264330407961
Option 2 ID : 264330407963
Option 3 ID : 264330407964
Option 4 ID : 264330407962
Status : Answered
Chosen Option : 4

Q.15 Venu invested a certain amount in shares. The shares rose by 25% on the first day, fell by 8% on the second day and fell by 10% the next day. The percentage profit or loss made by Venu is:

- Ans
- 1. 4.5%, profit
 - 2. 4.5%, loss
 - 3. 3.5%, profit
 - 4. 3.5%, loss

Question ID : 264330129399
Option 1 ID : 264330506964
Option 2 ID : 264330506963
Option 3 ID : 264330506965
Option 4 ID : 264330506962
Status : Answered
Chosen Option : 3

Q.1 Which of the following devices is most commonly used to connect multiple computers within a Local Area Network (LAN) and also efficiently manage data traffic by only sending data to the device it is intended for?

- Ans**
- 1. Switch
 - 2. Gateway
 - 3. Router
 - 4. Modem

Question ID : 264330182467
Option 1 ID : 264330715662
Option 2 ID : 264330715661
Option 3 ID : 264330715660
Option 4 ID : 264330715659
Status : Answered
Chosen Option : 3

Q.2 How do you access the 'Save As' function in MS Word 365?

- Ans**
- 1. By clicking on the 'Save' icon
 - 2. By going to the File tab and selecting 'Save As'
 - 3. By using the keyboard shortcut 'Ctrl + S'
 - 4. By right-clicking on the document and selecting 'Save As'

Question ID : 264330180850
Option 1 ID : 264330709363
Option 2 ID : 264330709365
Option 3 ID : 264330709364
Option 4 ID : 264330709366
Status : Answered
Chosen Option : 4

Q.3 Which of the following shortcut keys is used to open the help tab in the menu bar in MS Word 365?

- Ans**
- 1. F12
 - 2. F1
 - 3. F4
 - 4. F2

Question ID : 264330178603
Option 1 ID : 264330700442
Option 2 ID : 264330700439
Option 3 ID : 264330700441
Option 4 ID : 264330700440
Status : Answered
Chosen Option : 2

Q.4 The symbol which is used to separate the user name and email server parts of an email is:

- Ans
- 1. @
 - 2. \$
 - 3. %
 - 4. #

Question ID : 264330175928
Option 1 ID : 264330690007
Option 2 ID : 264330690010
Option 3 ID : 264330690009
Option 4 ID : 264330690008
Status : Answered
Chosen Option : 1

Q.5 In MS-Excel 365, which option allows you to sort data based on multiple columns simultaneously?

- Ans
- 1. AutoFilter
 - 2. Quick Sort
 - 3. Custom Sort
 - 4. Sort A to Z

Question ID : 264330181815
Option 1 ID : 264330713108
Option 2 ID : 264330713110
Option 3 ID : 264330713107
Option 4 ID : 264330713109
Status : Answered
Chosen Option : 3

Q.6 How can you delete a row or column in MS-Excel 365?

- Ans
- 1. Use the Ctrl+D keyboard shortcut.
 - 2. Right-click on the row or column and choose 'Delete' from the context menu.
 - 3. Use the Ctrl+H keyboard shortcut.
 - 4. Go to the 'Insert' tab on the Excel ribbon and click on 'Delete'.

Question ID : 264330173572
Option 1 ID : 264330680769
Option 2 ID : 264330680767
Option 3 ID : 264330680770
Option 4 ID : 264330680768
Status : Answered
Chosen Option : 2

Q.7 What is the purpose of the 'Center Align' text alignment option in Microsoft Word 365?

- Ans
- 1. It aligns the text along the right margin
 - 2. It centres the text horizontally between the margins
 - 3. It aligns the text along the left margin
 - 4. It adds extra spacing between words

Question ID : 264330180730
Option 1 ID : 264330708888
Option 2 ID : 264330708889
Option 3 ID : 264330708887
Option 4 ID : 264330708890
Status : Answered
Chosen Option : 2

Q.8 In MS Word 365 how can you access the spelling and grammar check feature in Microsoft Word?

- Ans**
- 1. Go to the 'Home' tab and click on 'Spelling & Grammar'
 - 2. Go to the 'Insert' tab and click on 'Spelling & Grammar'
 - 3. Go to the 'Review' tab and click on 'Spelling & Grammar'
 - 4. Go to the 'View' tab and click on 'Spelling & Grammar'

Question ID : 264330173585

Option 1 ID : 264330680820

Option 2 ID : 264330680822

Option 3 ID : 264330680821

Option 4 ID : 264330680819

Status : Answered

Chosen Option : 3

Q.9 Which of the following tabs on the ribbon in MS Word 365 provides options for formatting text, such as font style and size?

- Ans**
- 1. Insert
 - 2. File
 - 3. Home
 - 4. Page Layout

Question ID : 264330180853

Option 1 ID : 264330709377

Option 2 ID : 264330709375

Option 3 ID : 264330709376

Option 4 ID : 264330709378

Status : Answered

Chosen Option : 3

Q.10 In MS Excel 365, which cell reference type allows the cell reference in the formula to reflect the new location after a formula is copied and pasted to another cell?

- Ans**
- 1. Mixed cell reference
 - 2. Absolute cell reference
 - 3. Relative cell reference
 - 4. Circular cell reference

Question ID : 264330182115

Option 1 ID : 264330714301

Option 2 ID : 264330714300

Option 3 ID : 264330714299

Option 4 ID : 264330714302

Status : Answered

Chosen Option : 1

Constable Executive Male and Female in Delhi Police Examination 2023

Roll Number	
Candidate Name	
Venue Name	Indraprastha College of Engineering
Exam Date	16/11/2023
Exam Time	12:00 PM - 1:30 PM
Subject	Constable Executive Male and Female in Delhi Police Examination 2023

Section : **General Knowledge**

Q.1 The sale of car results in _____.

- Ans**
- 1. decrease in sale of final products
 - 2. no change
 - 3. decrease in GDP
 - 4. increase in GDP

Question ID : 264330116512

Option 1 ID : 264330458136

Option 2 ID : 264330458135

Option 3 ID : 264330458134

Option 4 ID : 264330458133

Status : Answered

Chosen Option : 4

Q.2 As of October 2022, fire altars are primarily found in which of the following Harappan cities?

- Ans**
- 1. Rakhigarhi
 - 2. Banawali
 - 3. Mohenjo-Daro
 - 4. Kalibangan

Question ID : 264330109643

Option 1 ID : 264330430852

Option 2 ID : 264330430850

Option 3 ID : 264330430851

Option 4 ID : 264330430849

Status : Not Answered

Chosen Option : --

Q.3 Which of the following will NOT be included in the estimation of national income?

- (i) Expenses on electricity by a factory
- (ii) Financial help to earthquake victims
- (iii) Imputed value of production for self-consumption
- (iv) Brokerage on sale of bonds

- Ans
- 1. Both (iii) and (iv)
 - 2. All of (i), (ii), (iii) and (iv)
 - 3. Both (i) and (ii)
 - 4. None of (i), (ii), (iii) and (iv)

Question ID : 264330112893

Option 1 ID : 264330443658

Option 2 ID : 264330443659

Option 3 ID : 264330443657

Option 4 ID : 264330443660

Status : Not Answered

Chosen Option : --

Q.4 Which of the following is the hardest mineral?

- Ans
- 1. Gypsum
 - 2. Talc
 - 3. Calcite
 - 4. Diamond

Question ID : 264330131681

Option 1 ID : 264330515824

Option 2 ID : 264330515823

Option 3 ID : 264330515826

Option 4 ID : 264330515825

Status : Answered

Chosen Option : 4

Q.5 In which year was the city of Agra founded?

- Ans
- 1. 1404
 - 2. 1204
 - 3. 1504
 - 4. 1304

Question ID : 26433089133

Option 1 ID : 264330350049

Option 2 ID : 264330350052

Option 3 ID : 264330350050

Option 4 ID : 264330350051

Status : Not Answered

Chosen Option : --

Q.6 What is the approximate percentage of adolescents (10-19 years) in India as per Census 2011?

- Ans
- 1. 22.6%
 - 2. 18.3%
 - 3. 24.3%
 - 4. 20.9%

Question ID : 264330177908
Option 1 ID : 264330697721
Option 2 ID : 264330697719
Option 3 ID : 264330697722
Option 4 ID : 264330697720
Status : Not Answered
Chosen Option : --

Q.7 Industrial Licensing is compulsory for five industries. Which of the following is NOT one of those five industries?

- Ans
- 1. Cottage Industries
 - 2. Industrial Explosives
 - 3. Alcohol
 - 4. Cigarettes

Question ID : 264330110193
Option 1 ID : 264330433052
Option 2 ID : 264330433051
Option 3 ID : 264330433049
Option 4 ID : 264330433050
Status : Answered
Chosen Option : 2

Q.8 Kunbi is the folk dance of which Indian state?

- Ans
- 1. Jharkhand
 - 2. Goa
 - 3. Tamil Nadu
 - 4. Bihar

Question ID : 264330132394
Option 1 ID : 264330518672
Option 2 ID : 264330518673
Option 3 ID : 264330518671
Option 4 ID : 264330518674
Status : Not Answered
Chosen Option : --

Q.9 Which of the following is NOT generally used in milk adulteration?

- Ans
- 1. Urea
 - 2. Starch
 - 3. Saw dust
 - 4. Detergent

Question ID : 264330111904
Option 1 ID : 264330439701
Option 2 ID : 264330439703
Option 3 ID : 264330439704
Option 4 ID : 264330439702
Status : Not Answered
Chosen Option : --

Q.10 The maximum duration of a test match of cricket is _____ days.

- Ans 1. five
 2. two
 3. four
 4. three

Question ID : 264330130648
Option 1 ID : 264330511706
Option 2 ID : 264330511703
Option 3 ID : 264330511705
Option 4 ID : 264330511704
Status : Not Answered
Chosen Option : --

Q.11 Sultan Azlan Shah Cup is held in _____ .

- Ans 1. Malaysia
 2. Iran
 3. India
 4. Indonesia

Question ID : 264330132557
Option 1 ID : 264330519323
Option 2 ID : 264330519326
Option 3 ID : 264330519324
Option 4 ID : 264330519325
Status : Not Answered
Chosen Option : --

Q.12 King Kanishka was a famous ruler of which Indian dynasty?

- Ans 1. Hind Unani
 2. Kushan
 3. Satavahana
 4. Shaka

Question ID : 264330119729
Option 1 ID : 264330469191
Option 2 ID : 264330469194
Option 3 ID : 264330469192
Option 4 ID : 264330469193
Status : Not Answered
Chosen Option : --

Q.13 Name the autobiography written by Hillary Clinton, as an account of her eight years as the first lady of the United States.

- Ans 1. Living History
 2. In the Shadow of Man
 3. My Life, My Truth
 4. Express Yourself

Question ID : 26433055357
Option 1 ID : 264330216413
Option 2 ID : 264330216414
Option 3 ID : 264330216412
Option 4 ID : 264330216415
Status : Answered
Chosen Option : 2

Q.14 Kumaradevi, a Lichchhavi princess, was married to whom among the following Gupta kings?

- Ans 1. Chandragupta I
 2. Srigupta
 3. Chandragupta II
 4. Samudragupta

Question ID : 264330120281
Option 1 ID : 264330471375
Option 2 ID : 264330471376
Option 3 ID : 264330471377
Option 4 ID : 264330471378
Status : Not Answered
Chosen Option : --

Q.15 Under which Act was the Central Legislature made of two houses?

- Ans 1. Government of India Act, 1935
 2. Government of India Act, 1919
 3. Government of India Act, 1947
 4. The Indian Councils Act, 1909

Question ID : 264330120294
Option 1 ID : 264330471428
Option 2 ID : 264330471427
Option 3 ID : 264330471429
Option 4 ID : 264330471430
Status : Not Answered
Chosen Option : --

Q.16 Identify the iron and steel plant that was developed in collaboration with Germany.

- Ans 1. Durgapur
 2. Visvesvaraya
 3. Rourkela
 4. Salem

Question ID : 264330178710
Option 1 ID : 264330700870
Option 2 ID : 264330700868
Option 3 ID : 264330700867
Option 4 ID : 264330700869
Status : Not Answered
Chosen Option : --

Q.17 From which of the following years did the fourth five-year plan commence?

- Ans 1. 1969
 2. 1964
 3. 1966
 4. 1963

Question ID : 264330118245
Option 1 ID : 264330464798
Option 2 ID : 264330464796
Option 3 ID : 264330464797
Option 4 ID : 264330464795
Status : Not Answered
Chosen Option : --

Q.18 _____ grows well on well-drained fertile soils in the flood plains of India where soils are renewed every year.

- Ans
- 1. Natural silk
 - 2. Jute
 - 3. Saffron
 - 4. Bajra

Question ID : 264330182947
Option 1 ID : 264330717520
Option 2 ID : 264330717523
Option 3 ID : 264330717521
Option 4 ID : 264330717522
Status : Not Answered
Chosen Option : --

Q.19 Which Committee made recommendations for the inclusion of fundamental duties in the Indian Constitution?

- Ans
- 1. Sardar Swaran Singh Committee
 - 2. AP Jain Committee
 - 3. PK Wattal Committee
 - 4. John Mathai Committee

Question ID : 264330114484
Option 1 ID : 264330450021
Option 2 ID : 264330450024
Option 3 ID : 264330450022
Option 4 ID : 264330450023
Status : Not Answered
Chosen Option : --

Q.20 Pradhan Mantri Kisan Maan Dhan Yojana is a government scheme meant for old age protection and social security of Small and Marginal Farmers (SMF). It provides for an assured Pension of _____ .

- Ans
- 1. ₹5,000 month
 - 2. ₹3,000 month
 - 3. ₹1,000 month
 - 4. ₹6,000 month

Question ID : 264330109125
Option 1 ID : 264330428780
Option 2 ID : 264330428778
Option 3 ID : 264330428777
Option 4 ID : 264330428779
Status : Not Answered
Chosen Option : --

Q.21 Who among the following social reformers was the inspiration behind the establishment of Prarthana Samaj in 1867?

- Ans
- 1. Raja Ram Mohan Roy
 - 2. Keshab Chandra Sen
 - 3. Durgaram Mehta
 - 4. Shiv Narayan Agnihotri

Question ID : 264330120271
Option 1 ID : 264330471342
Option 2 ID : 264330471341
Option 3 ID : 264330471340
Option 4 ID : 264330471339
Status : Not Answered
Chosen Option : --

Q.22 What are the paired organs of balance commonly found in aquatic invertebrates which are usually fluid-filled vesicles with sensory hairs?

- Ans
- 1. Statocysts
 - 2. Nephridia
 - 3. Radula
 - 4. Pharynx

Question ID : 26433055778
Option 1 ID : 264330218099
Option 2 ID : 264330218098
Option 3 ID : 264330218096
Option 4 ID : 264330218097
Status : Answered
Chosen Option : 2

Q.23 Natpuja dance is the folk dance of _____.

- Ans
- 1. Bihar
 - 2. Punjab
 - 3. Uttar Pradesh
 - 4. Assam

Question ID : 264330109288
Option 1 ID : 264330429431
Option 2 ID : 264330429429
Option 3 ID : 264330429430
Option 4 ID : 264330429432
Status : Answered
Chosen Option : 4

Q.24 Sulochana Chavan is a celebrated _____ singer who was awarded the Padma award in 2022.

- Ans
- 1. Carnatic
 - 2. Lavani
 - 3. Ghazal
 - 4. Sufi

Question ID : 264330111949
Option 1 ID : 264330439884
Option 2 ID : 264330439881
Option 3 ID : 264330439883
Option 4 ID : 264330439882
Status : Not Answered
Chosen Option : --

Q.25 _____ is the first Indian woman to have won a Grammy.

- Ans 1. Tanvi Shah
 2. Neeti Mohan
 3. Neha Bhasin
 4. Monali Thakur

Question ID : 264330113233
Option 1 ID : 264330445017
Option 2 ID : 264330445020
Option 3 ID : 264330445018
Option 4 ID : 264330445019
Status : Answered
Chosen Option : 4

Q.26 The Chairman and members of the State Public Service Commission are appointed by the _____.

- Ans 1. Governor
 2. President of India
 3. State Assembly
 4. Chief Minister

Question ID : 264330120169
Option 1 ID : 264330470933
Option 2 ID : 264330470934
Option 3 ID : 264330470932
Option 4 ID : 264330470931
Status : Answered
Chosen Option : 3

Q.27 'To Kill a Mockingbird', an English novel, was written by which of the following authors?

- Ans 1. Doris Lessing
 2. Harper Lee
 3. Muriel Spark
 4. Joseph Heller

Question ID : 26433055378
Option 1 ID : 264330216499
Option 2 ID : 264330216497
Option 3 ID : 264330216496
Option 4 ID : 264330216498
Status : Not Answered
Chosen Option : --

Q.28 Who among the following established the Ramakrishna Mission in 1897?

- Ans 1. Swami Dayananda Saraswati
 2. Swami Shraddhananda
 3. Swami Vivekananda
 4. Swami Acchutananda

Question ID : 264330114118
Option 1 ID : 264330448557
Option 2 ID : 264330448560
Option 3 ID : 264330448559
Option 4 ID : 264330448558
Status : Not Answered
Chosen Option : --

Q.29 'Lent' is a religious observance celebrated by the people who practice the _____ religion.

- Ans
- 1. Buddhist
 - 2. Jain
 - 3. Sikh
 - 4. Christian

Question ID : 264330113183
Option 1 ID : 264330444817
Option 2 ID : 264330444818
Option 3 ID : 264330444820
Option 4 ID : 264330444819
Status : Not Answered
Chosen Option : --

Q.30 What does the E stand for in SEZ?

- Ans
- 1. Economically
 - 2. External
 - 3. Economic
 - 4. Export

Question ID : 264330109406
Option 1 ID : 264330429902
Option 2 ID : 264330429903
Option 3 ID : 264330429901
Option 4 ID : 264330429904
Status : Answered
Chosen Option : 3

Q.31 r-selected species have maximum:

- Ans
- 1. reproductive rate
 - 2. mortality rate
 - 3. survival rate
 - 4. parental care

Question ID : 264330120959
Option 1 ID : 264330474052
Option 2 ID : 264330474053
Option 3 ID : 264330474054
Option 4 ID : 264330474051
Status : Answered
Chosen Option : 1

Q.32 Rahul decided to take a walk through a forest early in the morning. While he was inside the dense forest, he could see the beautiful sunrays through the small gaps within trees and clearly see the path taken by those rays. Of which effect was this a result?

- Ans**
- 1. Reflection
 - 2. Diffraction
 - 3. Dispersion
 - 4. Tyndall effect

Question ID : 264330177004
Option 1 ID : 264330694211
Option 2 ID : 264330694212
Option 3 ID : 264330694214
Option 4 ID : 264330694213
Status : Answered
Chosen Option : 3

Q.33 'Food, Work and Productivity' were the focus of which Five-Year Plan?

- Ans**
- 1. Ninth Five-Year Plan
 - 2. Fifth Five-Year Plan
 - 3. Seventh Five-Year Plan
 - 4. Fourth Five-Year Plan

Question ID : 264330112475
Option 1 ID : 264330441988
Option 2 ID : 264330441986
Option 3 ID : 264330441987
Option 4 ID : 264330441985
Status : Answered
Chosen Option : 4

Q.34 The Afghan noble Khan Jahan Lodi rebelled against the Mughal emperor _____ and was defeated.

- Ans**
- 1. Bahadur Shah
 - 2. Shah Jahan
 - 3. Aurangzeb
 - 4. Muhammad Azam Shah

Question ID : 264330182274
Option 1 ID : 264330714921
Option 2 ID : 264330714922
Option 3 ID : 264330714919
Option 4 ID : 264330714920
Status : Not Answered
Chosen Option : --

Q.35 According to the census of India 2011, which group of states has the highest sex ratio?

- Ans**
- 1. Kerala and Tamil Nadu
 - 2. Kerala and Andhra Pradesh
 - 3. Andhra Pradesh and Chhattisgarh
 - 4. Tamil Nadu and Bihar

Question ID : 264330167031
Option 1 ID : 264330655127
Option 2 ID : 264330655129
Option 3 ID : 264330655130
Option 4 ID : 264330655128
Status : Answered
Chosen Option : 1

Q.36 Which of the following Fundamental Duties is mentioned first in the Constitution of India?

- Ans**
- 1. To uphold and protect the sovereignty, unity and integrity of India
 - 2. To cherish and follow the noble ideals which inspired our national struggle for freedom
 - 3. To defend the country and render national service when called upon to do so
 - 4. To abide by the Constitution and respect its ideals and institutions, the National Flag and the National Anthem

Question ID : 264330130439
Option 1 ID : 264330510869
Option 2 ID : 264330510868
Option 3 ID : 264330510867
Option 4 ID : 264330510870
Status : Answered
Chosen Option : 1

Q.37 Which of the following denotes the ideals that the state should keep in mind while formulating policies and enacting laws?

- Ans**
- 1. Directive Principles Of State Policy
 - 2. Preamble
 - 3. Fundamental Right
 - 4. Fundamental Duties

Question ID : 264330173502
Option 1 ID : 264330680489
Option 2 ID : 264330680490
Option 3 ID : 264330680487
Option 4 ID : 264330680488
Status : Answered
Chosen Option : 3

Q.38 Dr. Shyama Prasad Mukherjee Swimming Pool Complex is located at:

- Ans
- 1. Bangalore
 - 2. Kolkata
 - 3. New Delhi
 - 4. Patiala

Question ID : 264330118439
Option 1 ID : 264330465158
Option 2 ID : 264330465160
Option 3 ID : 264330465157
Option 4 ID : 264330465159
Status : Not Answered
Chosen Option : --

Q.39 Arrange the following Fundamental Duties in sequential order according to their mention in the Constitution of India.

- A. To abide by the Constitution and respect its ideals and institutions.
- B. To uphold and protect the sovereignty, unity and integrity of India.
- C. To cherish and follow the noble ideals which inspired our national struggle for freedom.
- D. To safeguard public property and to abjure violence.

- Ans
- 1. B, A, D, C
 - 2. A, D, C, B
 - 3. A, C, B, D
 - 4. A, B, C, D

Question ID : 264330114752
Option 1 ID : 264330451096
Option 2 ID : 264330451094
Option 3 ID : 264330451095
Option 4 ID : 264330451093
Status : Answered
Chosen Option : 1

Q.40 Summer Olympics 1948, when Indian hockey team won gold medal was held in which of the following cities?

- Ans
- 1. Tokyo
 - 2. Los Angeles
 - 3. Rome
 - 4. London

Question ID : 264330176747
Option 1 ID : 264330693206
Option 2 ID : 264330693204
Option 3 ID : 264330693205
Option 4 ID : 264330693203
Status : Answered
Chosen Option : 1

Q.41 Champaner-Pavagadh Archaeological Park is situated in which of the following states of India?

- Ans
- 1. Bihar
 - 2. Rajasthan
 - 3. Haryana
 - 4. Gujarat

Question ID : 264330111848
Option 1 ID : 264330439477
Option 2 ID : 264330439479
Option 3 ID : 264330439480
Option 4 ID : 264330439478
Status : Answered
Chosen Option : 1

Q.42 In which year was Project Tiger launched in India to conserve the declining number of tigers?

- Ans
- 1. 1987
 - 2. 1973
 - 3. 1981
 - 4. 1970

Question ID : 264330179025
Option 1 ID : 264330702105
Option 2 ID : 264330702106
Option 3 ID : 264330702104
Option 4 ID : 264330702103
Status : Not Answered
Chosen Option : --

Q.43 Public Distribution System was relaunched by Government of India as _____ in 1997.

- Ans
- 1. Targeted Public Distribution System
 - 2. Targeted People Distribution System
 - 3. Cooperative Public Distribution System
 - 4. Public Food Distribution System

Question ID : 264330130671
Option 1 ID : 264330511797
Option 2 ID : 264330511796
Option 3 ID : 264330511795
Option 4 ID : 264330511798
Status : Answered
Chosen Option : 3

Q.44 Who is the first law officer of the Government of India?

- Ans
- 1. Law Commissioner
 - 2. Law Minister
 - 3. The Advocate-General for the State
 - 4. Attorney General of India

Question ID : 264330110590
Option 1 ID : 264330434639
Option 2 ID : 264330434640
Option 3 ID : 264330434638
Option 4 ID : 264330434637
Status : Answered
Chosen Option : 2

Q.45 What are sea salt, pollen, ash, smoke soot and fine soil associated with?

- Ans
- 1. Gases
 - 2. Dust particles
 - 3. Water vapour
 - 4. Meteors

Question ID : 264330137311
Option 1 ID : 264330537871
Option 2 ID : 264330537873
Option 3 ID : 264330537874
Option 4 ID : 264330537872
Status : Answered
Chosen Option : 2

Q.46 Sangeet Natak Akademi award winner Guru Bipin Singh is a famous _____ dancer.

- Ans
- 1. Manipuri
 - 2. Mohiniattam
 - 3. Odissi
 - 4. Sattriya

Question ID : 264330111968
Option 1 ID : 264330439958
Option 2 ID : 264330439957
Option 3 ID : 264330439959
Option 4 ID : 264330439960
Status : Not Answered
Chosen Option : --

Q.47 The _____ Tableau won 'People's Choice Award' at the 74th Republic Day Parade.

- Ans
- 1. Tripura
 - 2. Uttarakhand
 - 3. Gujarat
 - 4. Kerala

Question ID : 264330134252
Option 1 ID : 264330526006
Option 2 ID : 264330526004
Option 3 ID : 264330526003
Option 4 ID : 264330526005
Status : Not Answered
Chosen Option : --

Q.48 Sitara Devi and Lachhu Maharaj are popular for their mastery in which of the following styles of Indian dance?

- Ans
- 1. Manipuri
 - 2. Kuchipudi
 - 3. Bharatanatyam
 - 4. Kathak

Question ID : 264330130513
Option 1 ID : 264330511164
Option 2 ID : 264330511163
Option 3 ID : 264330511166
Option 4 ID : 264330511165
Status : Not Answered
Chosen Option : --

Q.49 Who is the head of the government among the following?

- Ans
- 1. President
 - 2. Speaker
 - 3. Vice President
 - 4. Prime Minister

Question ID : 264330173516
Option 1 ID : 264330680543
Option 2 ID : 264330680546
Option 3 ID : 264330680545
Option 4 ID : 264330680544
Status : Answered
Chosen Option : 1

Q.50 Who among the following was the founder of Satyashodhak Samaj, a society dedicated towards eradicating caste injustice?

- Ans
- 1. Bal Gangadhar Tilak
 - 2. Periyar Erode Venkata Ramasamy
 - 3. Jyotirao Govindrao Phule
 - 4. Mahatma Ayyankali

Question ID : 264330119005
Option 1 ID : 264330466677
Option 2 ID : 264330466678
Option 3 ID : 264330466675
Option 4 ID : 264330466676
Status : Not Answered
Chosen Option : --

Section : Reasoning

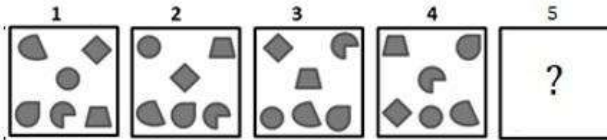
Q.1 Select the correct combination of mathematical signs that can sequentially replace the * signs and balance the given equation.

$$66*3*11*12*230$$

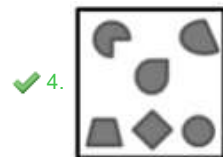
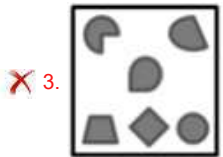
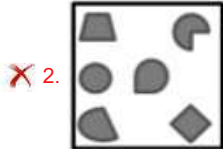
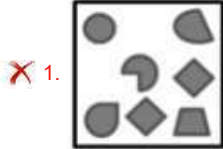
- Ans
- 1. $\times, -, =, +$
 - 2. $-, \times, +, =$
 - 3. $+, \times, -, =$
 - 4. $\times, -, +, =$

Question ID : 26433079091
Option 1 ID : 264330310370
Option 2 ID : 264330310371
Option 3 ID : 264330310369
Option 4 ID : 264330310368
Status : Not Answered
Chosen Option : --

Q.2 Each of the following questions consists of 4 figures marked 1, 2, 3 and 4 called the Problem Figures followed by 4 other figures. Select a figure from amongst the Answer Figures which will continue the same series as established by the four Problem Figures.



Ans



Question ID : 264330110540

Option 1 ID : 264330434440

Option 2 ID : 264330434437

Option 3 ID : 264330434439

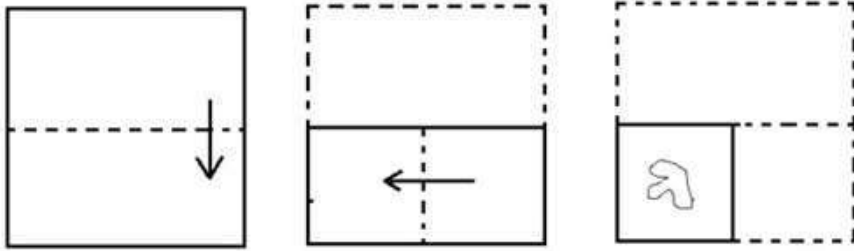
Option 4 ID : 264330434438

Status : Not Answered

Chosen Option : --

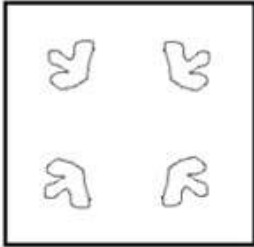
Adda247

Q.3 The sequence of folding a piece of paper and the manner in which the folded paper has been cut is shown below. Choose a figure which would most closely resemble the unfolded form of the paper.

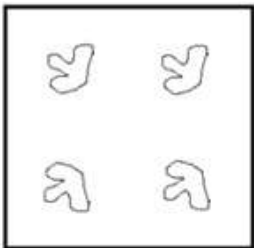


Ans

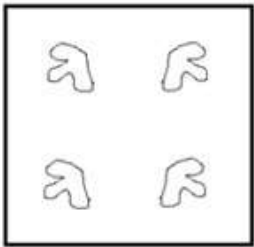
✓ 1.



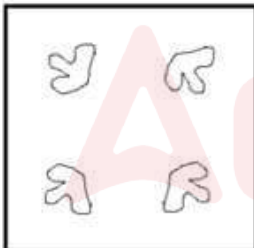
✗ 2.



✗ 3.



✗ 4.



Question ID : 264330112317

Option 1 ID : 264330441353

Option 2 ID : 264330441355

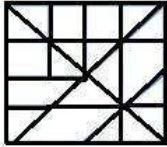
Option 3 ID : 264330441354

Option 4 ID : 264330441356

Status : Not Answered

Chosen Option : --

Q.4 Select the option figure that is embedded in the given figure (rotation is NOT allowed).



Ans


1.



2.



3.



4.



Question ID : 26433091722

Option 1 ID : 264330360254

Option 2 ID : 264330360253

Option 3 ID : 264330360256

Option 4 ID : 264330360255

Status : Not Answered

Chosen Option : --

Adda247

Q.5 Which figure should replace the question mark (?) if the series were to be continued?

M	3	E	A	L	S	I	M	
E	I	M	3	I	E	L	S	?
A	V	I	L	M	3	E	6	

Ans

1.

6	M
E	I
L	S

2.

6	2
E	I
L	S

3.

6	2
E	S
L	I

4.

S	2
E	6
L	I

Question ID : 264330130817
 Option 1 ID : 264330512380
 Option 2 ID : 264330512382
 Option 3 ID : 264330512381
 Option 4 ID : 264330512379
 Status : Not Answered
 Chosen Option : --

Q.6 Six letters, M, N, O, P, Q and R are written on different faces of a dice. Three positions of this dice are shown here. Find the letter on the face opposite N.



- Ans 1. M
 2. P
 3. R
 4. O

Question ID : 264330106403
 Option 1 ID : 264330417913
 Option 2 ID : 264330417915
 Option 3 ID : 264330417916
 Option 4 ID : 264330417914
 Status : Not Answered
 Chosen Option : --

Q.7 In a code language, if SMILE is coded as RLHKD and BELIEVE is coded as ADKHDUD, then how will LAUGHTER be coded?

- Ans
- 1. NCWIJVG T
 - 2. MBVHIUFS
 - 3. MBHVIFSU
 - 4. KZTFGSDQ

Question ID : 26433089486

Option 1 ID : 264330351446

Option 2 ID : 264330351448

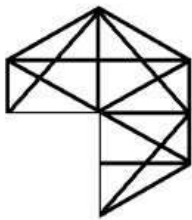
Option 3 ID : 264330351445

Option 4 ID : 264330351447

Status : Not Answered

Chosen Option : --

Q.8 Select a figure from amongst the four given options which, when placed in the blank space of figure (X), would complete the pattern.



X

Ans

1.



2.



3.



4.



Question ID : 264330102212

Option 1 ID : 264330401314

Option 2 ID : 264330401313

Option 3 ID : 264330401315

Option 4 ID : 264330401316

Status : Not Answered

Chosen Option : --

Q.9 Two statements are given followed by two conclusions numbered I and II. Assuming the statements to be true, even if they seem to be at variance with commonly known facts, decide which of the conclusions logically follow(s) from the statements.

Statements:

All insects are birds.

Some birds are fishes.

Conclusions:

I. All fishes are insects.

II. Some fishes are insects.

- Ans**
- 1. Only conclusion II follows
 - 2. Neither conclusion I nor II follows
 - 3. Both conclusions I and II follow
 - 4. Only conclusion I follows

Question ID : 26433045340

Option 1 ID : 264330177796

Option 2 ID : 264330177798

Option 3 ID : 264330177797

Option 4 ID : 264330177795

Status : Not Answered

Chosen Option : --

Q.10 Which two signs should be interchanged to make the given equation correct?

$$23 \times 7 - 76 + 87 \div 344 = 2$$

- Ans**
- 1. \times and $+$
 - 2. \div and $=$
 - 3. \times and $-$
 - 4. $+$ and \times

Question ID : 26433085734

Option 1 ID : 264330336640

Option 2 ID : 264330336637

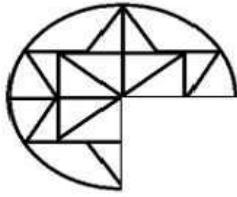
Option 3 ID : 264330336639

Option 4 ID : 264330336638

Status : Not Answered

Chosen Option : --

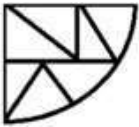
Q.11 Select a figure from amongst the four given options which, when placed in the blank space of figure (X), would complete the pattern.



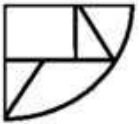
X

Ans

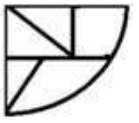
1.



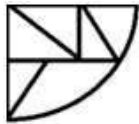
2.



3.



4.



Question ID : 264330102218

Option 1 ID : 264330401340

Option 2 ID : 264330401339

Option 3 ID : 264330401338

Option 4 ID : 264330401337

Status : Answered

Chosen Option : 4

Q.12 Select the option that is related to the fifth letter cluster in the same way as the second letter cluster is related to the first letter cluster and the fourth letter cluster is related to the third letter cluster.

EGAK : WKSO :: JRCU : BVUY :: CLAG : ?

Ans 1. USPC

2. IHAL

3. UPSK

4. IHEN

Question ID : 26433074689

Option 1 ID : 264330292846

Option 2 ID : 264330292844

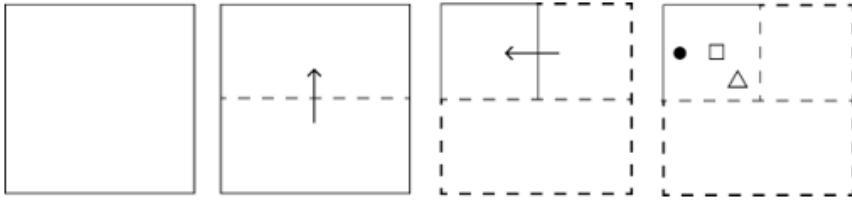
Option 3 ID : 264330292847

Option 4 ID : 264330292845

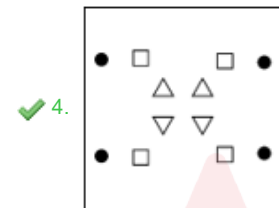
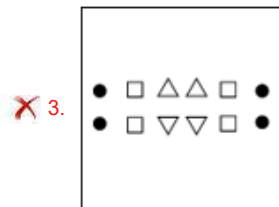
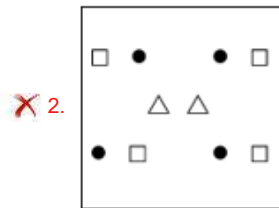
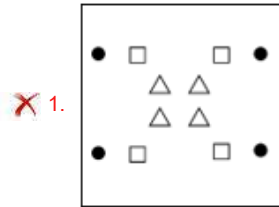
Status : Not Answered

Chosen Option : --

Q.13 A square sheet of paper is folded along the dotted line successively along the directions shown and is then punched in the last. How would the paper look when unfolded?



Ans



Question ID : 264330172426

Option 1 ID : 264330676258

Option 2 ID : 264330676257

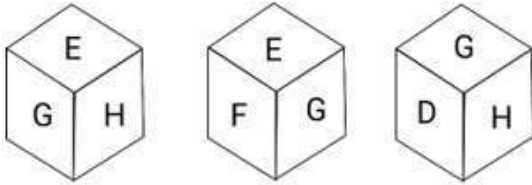
Option 3 ID : 264330676255

Option 4 ID : 264330676256

Status : Not Answered

Chosen Option : --

Q.14 Six letters, D, E, F, G, H and I are written on different faces of a dice. Three positions of this dice are shown here. Find the letter on the face opposite E.



- Ans
- 1. F
 - 2. D
 - 3. G
 - 4. I

Question ID : 264330106406

Option 1 ID : 264330417926

Option 2 ID : 264330417925

Option 3 ID : 264330417927

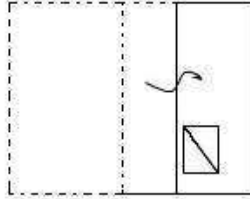
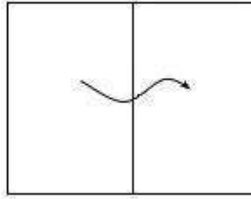
Option 4 ID : 264330417928

Status : Answered

Chosen Option : 2

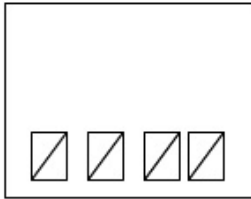


Q.15 A paper is folded and cut as shown below. How will it appear when unfolded?

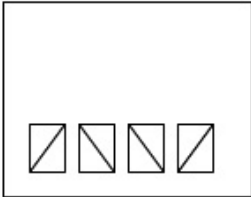


Ans

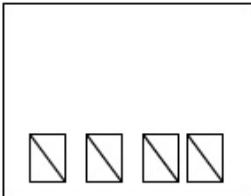
✗ 1.



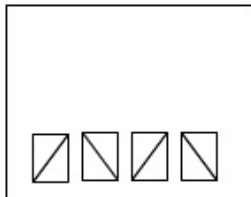
✗ 2.



✗ 3.



✓ 4.



Question ID : 264330118719

Option 1 ID : 264330466127

Option 2 ID : 264330466128

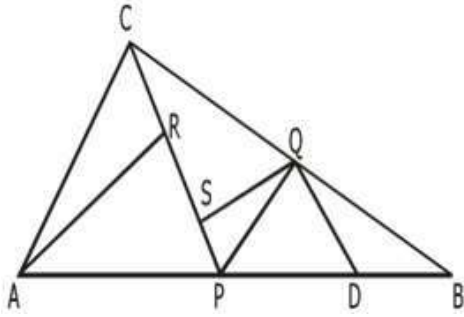
Option 3 ID : 264330466129

Option 4 ID : 264330466130

Status : Not Answered

Chosen Option : --

Q.16 How many triangles are there in the given figure?



- Ans
- 1. 13
 - 2. 11
 - 3. 10
 - 4. 12

Question ID : 26433080666
Option 1 ID : 264330316597
Option 2 ID : 264330316599
Option 3 ID : 264330316600
Option 4 ID : 264330316598

Status : Answered

Chosen Option : 2

Q.17 Muskan, Amrita, Pranjali, Deepti, Riya and Sonali are six friends sitting around a circle facing the centre. Muskan is between Amrita and Pranjali. Amrita is opposite to Deepti. Riya is not the immediate neighbour of Amrita. Who is opposite to Sonali?

- Ans
- 1. Deepti
 - 2. Riya
 - 3. Muskan
 - 4. Pranjali

Question ID : 26433086249
Option 1 ID : 264330338689
Option 2 ID : 264330338691
Option 3 ID : 264330338692
Option 4 ID : 264330338690

Status : Answered

Chosen Option : 4

Q.18 Select the option that is related to the fourth term in the same way as the first term is related to the second term and the fifth term is related to the sixth term.
 $144 : 12 :: ? : 25 :: 216 : 18$

- Ans
- 1. 280
 - 2. 260
 - 3. 300
 - 4. 250

Question ID : 264330102261
Option 1 ID : 264330401512
Option 2 ID : 264330401511
Option 3 ID : 264330401509
Option 4 ID : 264330401510

Status : Answered

Chosen Option : 3

Q.19 Select the option that represents the letters that, when sequentially placed from left to right in the blanks below, will complete the letter series.

A Q _ _ S A _ W E _ A _ _ E S _ Q W _ S

- Ans 1. WESQWAVE
 2. WEQSQWAE
 3. WEQSQAW E
 4. WSQSQAW E

Question ID : 26433092536

Option 1 ID : 264330363433

Option 2 ID : 264330363436

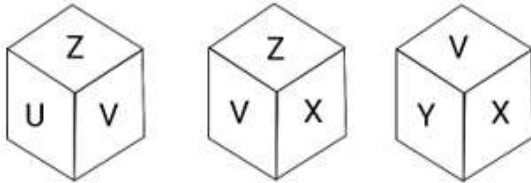
Option 3 ID : 264330363435

Option 4 ID : 264330363434

Status : Not Answered

Chosen Option : --

Q.20 Six letters, U, V, W, X, Y and Z are written on different faces of a dice. Three positions of this dice are shown here. Find the letter on the face opposite X.



- Ans 1. Z
 2. V
 3. U
 4. W

Question ID : 264330106414

Option 1 ID : 264330417960

Option 2 ID : 264330417958

Option 3 ID : 264330417957

Option 4 ID : 264330417959

Status : Not Answered

Chosen Option : --

Q.21 Select the set in which the numbers are related in the same way as are the numbers of the given sets.

(NOTE: Operations should be performed on the whole numbers, without breaking down the numbers into its constituent digits. E.g., 13 – Operations on 13 such as adding/ deleting/ multiplying etc. to 13 can be performed. Breaking down 13 into 1 and 3 and then performing mathematical operations on 1 and 3 is not allowed.)

(205, 146, 87)

(333, 274, 215)

- Ans 1. (222, 169, 123)
 2. (230, 181, 137)
 3. (188, 129, 70)
 4. (180, 130, 71)

Question ID : 264330178753

Option 1 ID : 264330701041

Option 2 ID : 264330701040

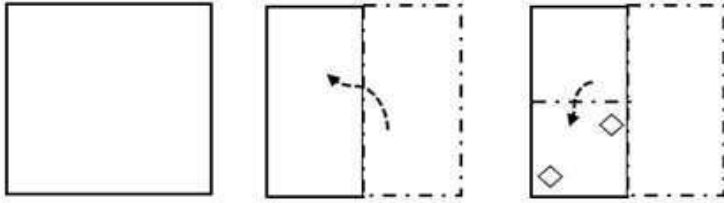
Option 3 ID : 264330701042

Option 4 ID : 264330701039

Status : Answered

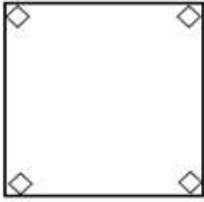
Chosen Option : 3

Q.22 A paper is folded and cut as shown below. How will it appear when unfolded?

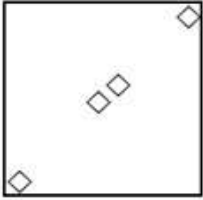


Ans

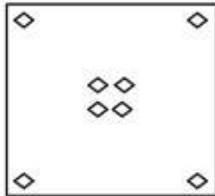
✗ 1.



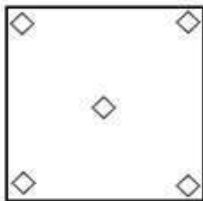
✗ 2.



✓ 3.



✗ 4.



Question ID : 264330117301

Option 1 ID : 264330461261

Option 2 ID : 264330461263

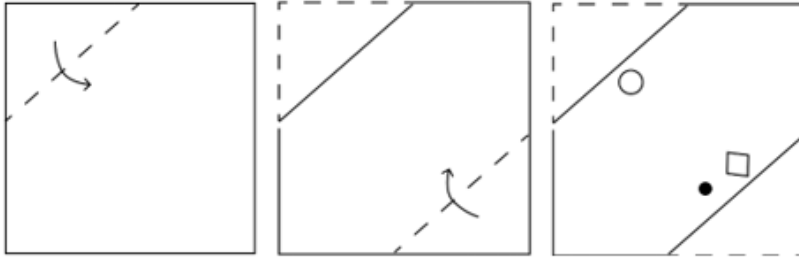
Option 3 ID : 264330461264

Option 4 ID : 264330461262

Status : Not Answered

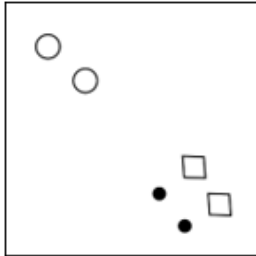
Chosen Option : --

Q.23 A square sheet of paper is folded along the dotted line successively along the directions shown and is then punched in the last. How would the paper look when unfolded?

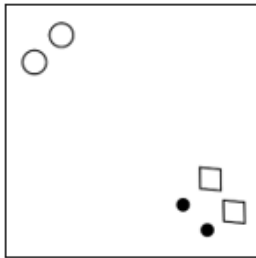


Ans

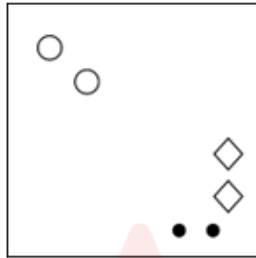
✓ 1.



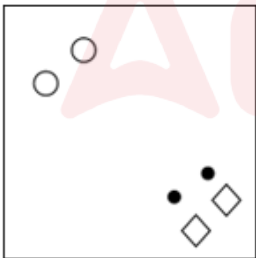
✗ 2.



✗ 3.



✗ 4.



Question ID : 264330172408

Option 1 ID : 264330676185

Option 2 ID : 264330676184

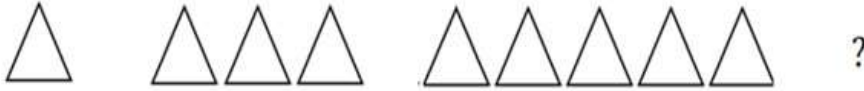
Option 3 ID : 264330676183

Option 4 ID : 264330676186

Status : Answered

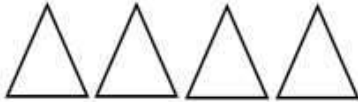
Chosen Option : 1

Q.24 Select the figure that will replace the question mark (?) in the following figure series.

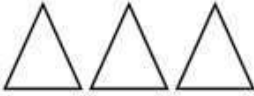


Ans

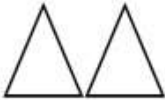
1.



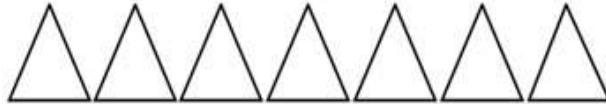
2.



3.



4.



Question ID : 264330112027

Option 1 ID : 264330440195

Option 2 ID : 264330440196

Option 3 ID : 264330440193

Option 4 ID : 264330440194

Status : Answered

Chosen Option : 4

Q.25 Select the number from among the given options that can replace the question mark (?) in the following series.

2, 15, 41, 93, 197, ?

Ans 1. 324

2. 405

3. 320

4. 534

Question ID : 264330109770

Option 1 ID : 264330431358

Option 2 ID : 264330431357

Option 3 ID : 264330431359

Option 4 ID : 264330431360

Status : Not Answered

Chosen Option : --

Section : Numerical Ability

Q.1 The concentration of three wines A, B, and C is given as 15%, 30%, and 45%, respectively. They are mixed in the ratio of p : 5 : 3, resulting in a 30% concentration solution. What is the value of p?

Ans 1. 2

2. 3

3. 1

4. 4

Question ID : 264330178923

Option 1 ID : 264330701696

Option 2 ID : 264330701697

Option 3 ID : 264330701695

Option 4 ID : 264330701698

Status : Not Answered

Chosen Option : --

Q.2 The radius of a sphere is 1.8 cm. Find the exact volume (in cm^3) of this sphere.

Ans 1. 7.776π

2. 7.676π

3. 7.786π

4. 7.766π

Question ID : 264330112558

Option 1 ID : 264330442317

Option 2 ID : 264330442318

Option 3 ID : 264330442320

Option 4 ID : 264330442319

Status : Not Answered

Chosen Option : --

Q.3

Evaluate $\frac{(4.7)^2 - (1.3)^2}{4.7 - 1.3}$.

Ans 1. 5

2. 3

3. 4

4. 6

Question ID : 264330111436

Option 1 ID : 264330437831

Option 2 ID : 264330437832

Option 3 ID : 264330437830

Option 4 ID : 264330437829

Status : Not Answered

Chosen Option : --

Q.4 Simplify the following.
 $(8888 \div 88) \div 5$

Ans 1. $22\frac{1}{5}$

2. $25\frac{1}{4}$

3. $20\frac{1}{5}$

4. $15\frac{1}{5}$

Question ID : 264330119324

Option 1 ID : 264330467585

Option 2 ID : 264330467586

Option 3 ID : 264330467584

Option 4 ID : 264330467583

Status : Not Answered

Chosen Option : --

Q.5 There are 4 horses grazing at each corner of a square field of side 63 m. They are roped in such a way that they can touch the middle of each side. Find the remaining area of the ground where they do not graze. (Use $\pi = \frac{22}{7}$)

- Ans**
- 1. 780.50 m²
 - 2. 750.50 m²
 - 3. 850.50 m²
 - 4. 800.50 m²

Question ID : 26433091570
Option 1 ID : 264330359646
Option 2 ID : 264330359645
Option 3 ID : 264330359648
Option 4 ID : 264330359647
Status : Not Answered
Chosen Option : --

Q.6 Find the HCF of 3.6, 0.54 and 1.08.

- Ans**
- 1. 1.8
 - 2. 0.018
 - 3. 0.18
 - 4. 18

Question ID : 264330104224
Option 1 ID : 264330409198
Option 2 ID : 264330409200
Option 3 ID : 264330409199
Option 4 ID : 264330409197
Status : Not Answered
Chosen Option : --

Q.7 A man borrows ₹2,196 and agrees to return it with compound interest at the rate of 25% in three equal annual instalments at the end of the first, second and the third year. The amount of instalment (in ₹) is:

- Ans**
- 1. 1,125
 - 2. 984
 - 3. 1,072
 - 4. 732

Question ID : 264330103557
Option 1 ID : 264330406533
Option 2 ID : 264330406536
Option 3 ID : 264330406535
Option 4 ID : 264330406534
Status : Not Answered
Chosen Option : --

Q.8 If $A : B : C = 2 : 3 : 5$, then the ratio $\frac{A}{B} : \frac{B}{C} : \frac{C}{A}$ is equal to:

- Ans
- 1. 20 : 18 : 75
 - 2. 75 : 20 : 29
 - 3. 18 : 20 : 79
 - 4. 20 : 25 : 39

Question ID : 264330106077
Option 1 ID : 264330416609
Option 2 ID : 264330416612
Option 3 ID : 264330416611
Option 4 ID : 264330416610
Status : Not Answered
Chosen Option : --

Q.9 Find the time taken by a train 750 m long to cross a platform twice its length at a speed of 81 km/h.

- Ans
- 1. 80 sec
 - 2. 90 sec
 - 3. 100 sec
 - 4. 75 sec

Question ID : 264330183829
Option 1 ID : 264330720992
Option 2 ID : 264330720993
Option 3 ID : 264330720994
Option 4 ID : 264330720995
Status : Not Answered
Chosen Option : --

Q.10 A number y , when reduced by 25%, becomes 120% of a second number z . What percentage of z is y ?

- Ans
- 1. 160%
 - 2. 145%
 - 3. 175%
 - 4. 150%

Question ID : 264330131132
Option 1 ID : 264330513641
Option 2 ID : 264330513640
Option 3 ID : 264330513642
Option 4 ID : 264330513639
Status : Not Answered
Chosen Option : --

Q.11 A sum was invested at a certain rate of simple interest per annum for 2 years. Had it been invested at 3% per annum more rate than the existing rate, the simple interest accrued in the 2 years would have been ₹240 more. The sum invested was:

- Ans
- 1. ₹16,000
 - 2. ₹4,000
 - 3. ₹24,000
 - 4. ₹6,000

Question ID : 264330122721
Option 1 ID : 264330480982
Option 2 ID : 264330480979
Option 3 ID : 264330480980
Option 4 ID : 264330480981
Status : Not Answered
Chosen Option : --

Q.12 Deepak sold a bike to Sharath at a profit of 40%. Sharath sold his bike to Sivaji at a loss of 30%. If Deepak paid ₹8,000 for this bike, then find the cost price of the bike for Sivaji.

- Ans
- 1. ₹6,728
 - 2. ₹7,840
 - 3. ₹5,423
 - 4. ₹11,200

Question ID : 264330104351
Option 1 ID : 264330409706
Option 2 ID : 264330409707
Option 3 ID : 264330409705
Option 4 ID : 264330409708
Status : Not Answered
Chosen Option : --

Q.13 The marked price of a book is ₹767. A shopkeeper allows a discount of 20% and still earns a profit of 30%. Find the cost price of the book (in ₹).

- Ans
- 1. 680
 - 2. 450
 - 3. 472
 - 4. 525

Question ID : 264330126516
Option 1 ID : 264330495736
Option 2 ID : 264330495738
Option 3 ID : 264330495739
Option 4 ID : 264330495737
Status : Not Answered
Chosen Option : --

Q.14 P aims to get total 360 marks out of 500. He gets 5% less than his target. How much does he get?

- Ans
- 1. 335
 - 2. 325
 - 3. 340
 - 4. 330

Question ID : 264330126100
Option 1 ID : 264330494074
Option 2 ID : 264330494072
Option 3 ID : 264330494075
Option 4 ID : 264330494073
Status : Not Answered
Chosen Option : --

Q.15 If A and B together can complete a work in 15 days, B and C together in 12 days and C and A together in 10 days, then in how many days can B alone complete the work?

- Ans
- 1. 30
 - 2. 45
 - 3. 35
 - 4. 40

Question ID : 264330104327
Option 1 ID : 264330409609
Option 2 ID : 264330409612
Option 3 ID : 264330409610
Option 4 ID : 264330409611
Status : Not Answered
Chosen Option : --

Section : Computer Proficiency

Q.1 In MS Excel 365, which of the following is the correct sequence for deleting a column in MS-Excel spreadsheet?

- Ans
- 1. Select the cell<<Right click<<Delete<<Entire Row
 - 2. Select the cell<<Left click<<Delete<<Entire Row
 - 3. Select the cell<<Right click<<Delete<<Entire Column
 - 4. Select the cell<<Left click<<Delete<<Entire Column

Question ID : 264330176696
Option 1 ID : 264330693000
Option 2 ID : 264330693002
Option 3 ID : 264330692999
Option 4 ID : 264330693001
Status : Answered
Chosen Option : 3

Q.2 Which of the following is a shortcut key for Save as option in MS Word 365?

- Ans
- 1. F1
 - 2. F11
 - 3. F12
 - 4. F2

Question ID : 264330180434
Option 1 ID : 264330707703
Option 2 ID : 264330707704
Option 3 ID : 264330707705
Option 4 ID : 264330707706
Status : Answered
Chosen Option : 1

Q.3 What is the purpose of the 'Font Color' option in Microsoft Word 365?

- Ans
- 1. Changing the font style
 - 2. Changing the font size
 - 3. Applying a background colour to text
 - 4. Changing the colour of the text

Question ID : 264330180712
Option 1 ID : 264330708815
Option 2 ID : 264330708816
Option 3 ID : 264330708817
Option 4 ID : 264330708818
Status : Answered
Chosen Option : 4

Q.4 Which menu tab on Microsoft Word's 365 ribbon contains options for text formatting and editing?

- Ans
- 1. File
 - 2. Home
 - 3. View
 - 4. Insert

Question ID : 264330180733
Option 1 ID : 264330708899
Option 2 ID : 264330708900
Option 3 ID : 264330708901
Option 4 ID : 264330708902
Status : Answered
Chosen Option : 4

Q.5 In MS Excel 365, which of the following is NOT a method to open a spreadsheet in MS-Excel?

- Ans
- 1. Shift + Ctrl + N
 - 2. Alt + F + O
 - 3. Ctrl + N
 - 4. File -> open

Question ID : 264330178255
Option 1 ID : 264330699078
Option 2 ID : 264330699076
Option 3 ID : 264330699077
Option 4 ID : 264330699075
Status : Answered
Chosen Option : 1

Q.6 Which of the following is a common element in an MS Word 365 document's header or footer?

- Ans
- 1. Document title
 - 2. Bullet points
 - 3. Page number
 - 4. Font colour

Question ID : 264330180861
Option 1 ID : 264330709408
Option 2 ID : 264330709409
Option 3 ID : 264330709407
Option 4 ID : 264330709410
Status : Answered
Chosen Option : 3

Q.7 What information is typically required to sign in to an email client?

- Ans
- 1. Full name and date of birth
 - 2. Email address and password
 - 3. Social media account details
 - 4. Phone number and address

Question ID : 264330173551
Option 1 ID : 264330680684
Option 2 ID : 264330680683
Option 3 ID : 264330680686
Option 4 ID : 264330680685
Status : Answered
Chosen Option : 2

Q.8 In MS Excel 365 which of the following statements related to deleting rows in an excel sheet is correct?

- Ans
- 1. If you want to delete multiple rows at once, simply select the rows by clicking and dragging over the row numbers, and then press 'Ctrl' and 'space'.
 - 2. If you want to delete multiple rows at once, simply select the rows by clicking and dragging over the row numbers, and then press 'Ctrl' and '-'.
 - 3. If you want to delete multiple rows at once, simply select the rows by clicking and dragging over the row numbers, and then press 'Ctrl' and '+'.
 - 4. If you want to delete multiple rows at once, simply select the rows by clicking and dragging over the row numbers, and then press 'Ctrl' and 'Enter'.

Question ID : 264330180417
Option 1 ID : 264330707637
Option 2 ID : 264330707636
Option 3 ID : 264330707635
Option 4 ID : 264330707638
Status : Answered
Chosen Option : 1

Q.9 Which of the following shortcut keys is used to copy formatting in MS Word 365?

- Ans**
- 1. Ctrl + Shift + A
 - 2. Ctrl + Shift + D
 - 3. Ctrl + Shift + C
 - 4. Ctrl + Shift + V

Question ID : **264330180432**
Option 1 ID : **264330707697**
Option 2 ID : **264330707698**
Option 3 ID : **264330707695**
Option 4 ID : **264330707696**
Status : **Answered**
Chosen Option : **3**

Q.10 Which of the following services allows users to buy and sell products online?

- Ans**
- 1. Instant messaging
 - 2. E-commerce
 - 3. Video conferencing
 - 4. Streaming

Question ID : **264330180807**
Option 1 ID : **264330709193**
Option 2 ID : **264330709192**
Option 3 ID : **264330709194**
Option 4 ID : **264330709191**
Status : **Answered**
Chosen Option : **2**


Adda247

Constable Executive Male and Female in Delhi Police Examination 2023

Roll Number	
Candidate Name	
Venue Name	Digitrack IT Services
Exam Date	16/11/2023
Exam Time	3:00 PM - 4:30 PM
Subject	Constable Executive Male and Female in Delhi Police Examination 2023

Section : **General Knowledge**

Q.1 Which of the following was opened by Gour Mohan Addy in 1829?

- Ans 1. Hindi Seminary
 2. Anglo-India Seminary
 3. Anglo-Indian School
 4. Oriental Seminary

Question ID : **264330120154**
Option 1 ID : **264330470874**
Option 2 ID : **264330470872**
Option 3 ID : **264330470871**
Option 4 ID : **264330470873**
Status : **Not Answered**
Chosen Option : --

Q.2 In which pair of states is Holi also celebrated as Dola Purnima?

- Ans 1. West Bengal and Odisha
 2. Rajasthan and Punjab
 3. Nagaland and Sikkim
 4. Maharashtra and Gujarat

Question ID : **264330111161**
Option 1 ID : **264330436730**
Option 2 ID : **264330436731**
Option 3 ID : **264330436732**
Option 4 ID : **264330436729**
Status : **Not Answered**
Chosen Option : --

Q.3 Which political party was in power when Sardar Swaran Singh Committee made recommendations about Fundamental Duties?

- Ans 1. Indian National Congress
 2. Bharatiya Janata Party
 3. Janata Dal
 4. Communist Party of India

Question ID : **264330173480**
Option 1 ID : **264330680399**
Option 2 ID : **264330680400**
Option 3 ID : **264330680401**
Option 4 ID : **264330680402**
Status : **Answered**
Chosen Option : **1**

Q.4 Which Article of the Indian Constitution is related with promotion of co-operative societies?

- Ans
- 1. Article 31 B
 - 2. Article 51 A
 - 3. Article 43 B
 - 4. Article 39 A

Question ID : 264330180060
Option 1 ID : 264330706226
Option 2 ID : 264330706225
Option 3 ID : 264330706223
Option 4 ID : 264330706224
Status : Not Answered
Chosen Option : --

Q.5 The Indian government launched the 'Garib Kalyan Rojgar Abhiyaan' ('GKRA') on 20th June 2020 to provide work for how many days?

- Ans
- 1. 125 days
 - 2. 130 days
 - 3. 115 days
 - 4. 120 days

Question ID : 264330132755
Option 1 ID : 264330520117
Option 2 ID : 264330520118
Option 3 ID : 264330520115
Option 4 ID : 264330520116
Status : Answered
Chosen Option : 4

Q.6 In 2016, Yamini Krishnamurthy received the Padma Vibhushan for her contribution to which fields of classical dance?

- Ans
- 1. Bharatanatyam and Kathak
 - 2. Bharatanatyam and Manipuri
 - 3. Bharatanatyam and Odissi
 - 4. Bharatanatyam and Kuchipudi

Question ID : 264330111202
Option 1 ID : 264330436896
Option 2 ID : 264330436895
Option 3 ID : 264330436893
Option 4 ID : 264330436894
Status : Answered
Chosen Option : 4

Q.7 शतरंज में उपयोग होने वाले सफेद हाथियों (rooks) की संख्या _____ होती है।

- Ans
- 1. तीन
 - 2. एक
 - 3. दो
 - 4. चार

Question ID : 264330130639
Option 1 ID : 264330511669
Option 2 ID : 264330511667
Option 3 ID : 264330511668
Option 4 ID : 264330511670
Status : Answered
Chosen Option : 3

Q.8 As per Human Development Report 2021-22, what is the female Life Expectancy at birth in India?

- Ans
- 1. 63.9 years
 - 2. 68.9 years
 - 3. 73.9 years
 - 4. 65.9 years

Question ID : 264330179551
Option 1 ID : 264330704205
Option 2 ID : 264330704203
Option 3 ID : 264330704206
Option 4 ID : 264330704204
Status : Not Answered
Chosen Option : --

Q.9 जब लावा, भूमि में विकसित दरारें और विदरों से अपना रास्ता बनाता है, तो यह जमीन के लगभग लंबवत जम जाता है। यह दीवार जैसी संरचना को विकसित करने के लिए उसी स्थिति में ठंडा हो जाता है। इस संरचना को क्या कहा जाता है?

- Ans
- 1. लैकोलिथ (Lacolith)
 - 2. डाइक्स (Dykes)
 - 3. लापोलिथ (Lapolith)
 - 4. फैकोलिथ (Phacolith)

Question ID : 264330134904
Option 1 ID : 264330528554
Option 2 ID : 264330528552
Option 3 ID : 264330528551
Option 4 ID : 264330528553
Status : Answered
Chosen Option : 2

Q.10 Which of the following is NOT found in animal cells?

- Ans
- 1. Endoplasmic reticulum
 - 2. Mitochondria
 - 3. Plastid
 - 4. Golgi Complex

Question ID : 264330117604
Option 1 ID : 264330462444
Option 2 ID : 264330462441
Option 3 ID : 264330462442
Option 4 ID : 264330462443
Status : Answered
Chosen Option : 3

Q.11 Ustad Latafat Hussain Khan is associated with the _____.

- Ans
- 1. Patiala gharana
 - 2. Agra gharana
 - 3. Kirana gharana
 - 4. Gwalior gharana

Question ID : 264330116416
Option 1 ID : 264330457750
Option 2 ID : 264330457749
Option 3 ID : 264330457751
Option 4 ID : 264330457752
Status : Answered
Chosen Option : 4

Q.12 Which of the following Articles deals with the amendment of the Indian Constitution?

- Ans
- 1. Article 360
 - 2. Article 352
 - 3. Article 356
 - 4. Article 368

Question ID : 264330114135
Option 1 ID : 264330448627
Option 2 ID : 264330448625
Option 3 ID : 264330448626
Option 4 ID : 264330448628
Status : Answered
Chosen Option : 1

Q.13 Which canal has a head regulator capacity of 1133 cumecs (40000 cusecs) and a length of 532 km for which it is considered the world's largest lined irrigation canal?

- Ans
- 1. Trivandrum-Shoranur canal
 - 2. Kalingarayan Canal
 - 3. Cumbarjua Canal
 - 4. Narmada Main Canal

Question ID : 264330113524
Option 1 ID : 264330446181
Option 2 ID : 264330446184
Option 3 ID : 264330446183
Option 4 ID : 264330446182
Status : Not Answered
Chosen Option : --

Q.14 Which of the following statements is NOT true about the two-sector model?

- Ans
- 1. There is no foreign sector
 - 2. The government sector plays an important role.
 - 3. The economy is considered to be closed.
 - 4. Firms are the only producing sector in the economy.

Question ID : 264330120879
Option 1 ID : 264330473733
Option 2 ID : 264330473734
Option 3 ID : 264330473731
Option 4 ID : 264330473732
Status : Not Answered
Chosen Option : --

Q.15 Which concept is related to the disposal of the equity of public sector units in the market for covering the fiscal deficit of the central government?

- Ans
- 1. Liberalisation
 - 2. Denationalisation
 - 3. Disinvestment
 - 4. Globalisation

Question ID : 264330109137
Option 1 ID : 264330428827
Option 2 ID : 264330428826
Option 3 ID : 264330428825
Option 4 ID : 264330428828
Status : Answered
Chosen Option : 4

Q.16 Article 51 of Directive Principles of State Policy enumerates which of the following?

- Ans 1. Promotion of international peace and security
 2. Separation of judiciary from executive
 3. Uniform civil code for the citizens
 4. Organisation of agricultural and animal husbandry

Question ID : 264330110586
Option 1 ID : 264330434623
Option 2 ID : 264330434622
Option 3 ID : 264330434624
Option 4 ID : 264330434621
Status : Not Answered
Chosen Option : --

Q.17 Which species plays a keystone role in supporting insectivore populations with a year-round available food resource?

- Ans 1. Cycas species
 2. Ficus species
 3. Meliaceae species
 4. Ziziphus species

Question ID : 264330130998
Option 1 ID : 264330513103
Option 2 ID : 264330513105
Option 3 ID : 264330513106
Option 4 ID : 264330513104
Status : Not Answered
Chosen Option : --

Q.18 Which produce was available as a surplus marketed by the farmers in the market during the Green Revolution?

- Ans 1. Oil seeds
 2. Wheat and jowar
 3. Wheat and rice
 4. Rice and maize

Question ID : 264330174150
Option 1 ID : 264330683039
Option 2 ID : 264330683041
Option 3 ID : 264330683042
Option 4 ID : 264330683040
Status : Answered
Chosen Option : 3

Q.19 Sunayana Hazarilal won the Padma Shri for which form of classical dance?

- Ans 1. Kathakali
 2. Odissi
 3. Kathak
 4. Bharatanatyam

Question ID : 26433074886
Option 1 ID : 264330293632
Option 2 ID : 264330293633
Option 3 ID : 264330293634
Option 4 ID : 264330293635
Status : Answered
Chosen Option : 3

Q.20 In which state of India was the first train introduced in the year 1853?

- Ans
- 1. Rajasthan
 - 2. West Bengal
 - 3. Karnataka
 - 4. Maharashtra

Question ID : 264330178717
Option 1 ID : 264330700895
Option 2 ID : 264330700896
Option 3 ID : 264330700897
Option 4 ID : 264330700898
Status : Answered
Chosen Option : 4

Q.21 Who issued the silver rupee, which remained a standard coin for centuries after the ruler?

- Ans
- 1. Babur
 - 2. Sher Shah Suri
 - 3. Humayun
 - 4. Akbar

Question ID : 264330109026
Option 1 ID : 264330428381
Option 2 ID : 264330428383
Option 3 ID : 264330428382
Option 4 ID : 264330428384
Status : Answered
Chosen Option : 2

Q.22 Seema switched on an electric circuit and went away to drink some water. She came back after 2 minutes and noticed that the circuit had 2.5 A of current flowing through it. The net charge that had flown through the circuit is:

- Ans
- 1. 1.25 C
 - 2. 5 C
 - 3. 300 C
 - 4. 0.0833 C

Question ID : 264330177008
Option 1 ID : 264330694229
Option 2 ID : 264330694227
Option 3 ID : 264330694230
Option 4 ID : 264330694228
Status : Not Answered
Chosen Option : --

Q.23 In which year was Volleyball Federation of India established?

- Ans
- 1. 1948
 - 2. 1949
 - 3. 1950
 - 4. 1951

Question ID : 264330110371
Option 1 ID : 264330433761
Option 2 ID : 264330433762
Option 3 ID : 264330433763
Option 4 ID : 264330433764
Status : Answered
Chosen Option : 4

Q.24 Identify the artist who is NOT related to the Carnatic music family.

- Ans 1. TS Vinayakram
 2. Aruna Sairam
 3. Begum Akhtar
 4. MS Subbulakshmi

Question ID : 264330111186
Option 1 ID : 264330436830
Option 2 ID : 264330436832
Option 3 ID : 264330436831
Option 4 ID : 264330436829
Status : Answered
Chosen Option : 3

Q.25 'Imperfect' is the autobiography of which Indian cricketer?

- Ans 1. Sanjay Manjrekar
 2. Kapil Dev
 3. Sunil Gavaskar
 4. Ravi Shastri

Question ID : 26433092395
Option 1 ID : 264330362870
Option 2 ID : 264330362872
Option 3 ID : 264330362871
Option 4 ID : 264330362869
Status : Answered
Chosen Option : 3

Q.26 Who among the following was re-elected in 1938 as the president of the Indian National Congress session for 1939?

- Ans 1. Satyendra Prasanna Sinha
 2. Subhash Chandra Bose
 3. Lal Mohan Ghosh
 4. Pattabhi Sittaramayya

Question ID : 264330120428
Option 1 ID : 264330471963
Option 2 ID : 264330471964
Option 3 ID : 264330471966
Option 4 ID : 264330471965
Status : Answered
Chosen Option : 2

Q.27 Which of the following were the two major internal land routes through which trade and commerce took place in the post-Mauryan period?

- Ans 1. Pashchimpatha and Uttarapatha
 2. Uttarapatha and Dakshinapatha
 3. Dakshinapatha and Purvapatha
 4. Dakshinapatha and Pashchimpatha

Question ID : 264330114818
Option 1 ID : 264330451358
Option 2 ID : 264330451359
Option 3 ID : 264330451357
Option 4 ID : 264330451360
Status : Not Answered
Chosen Option : --

Q.28 Tariffs and quotas in the trade issues are used to _____.

- Ans 1. protect domestic companies
 2. promote free trade between countries
 3. protect only the public sector
 4. protect only the private sector

Question ID : 264330111753
Option 1 ID : 264330439099
Option 2 ID : 264330439100
Option 3 ID : 264330439097
Option 4 ID : 264330439098
Status : Answered
Chosen Option : 3

Q.29 When is the festival of Ram Navami celebrated in India?

- Ans 1. Ninth day of Ashwin month
 2. Ninth day of Pausha month
 3. Ninth day of Magha month
 4. Ninth day of Chaitra month

Question ID : 264330132972
Option 1 ID : 264330520947
Option 2 ID : 264330520950
Option 3 ID : 264330520949
Option 4 ID : 264330520948
Status : Answered
Chosen Option : 4

Q.30 Which Viceroy of India took initiative in creating local government bodies in India?

- Ans 1. Lord Harding II
 2. Lord Mayo
 3. Lord Rippon
 4. Lord Minto

Question ID : 264330168222
Option 1 ID : 264330659765
Option 2 ID : 264330659764
Option 3 ID : 264330659766
Option 4 ID : 264330659763
Status : Answered
Chosen Option : 3

Q.31 The originator of Buddhism, Gautam Buddha, was the prince of which of the following republican states during the Mahajanapada period in Ancient India?

- Ans 1. Kamboja
 2. Shakya
 3. Kuru
 4. Vajji

Question ID : 264330120237
Option 1 ID : 264330471204
Option 2 ID : 264330471206
Option 3 ID : 264330471203
Option 4 ID : 264330471205
Status : Answered
Chosen Option : 2

Q.32 Which of the following temples is built in the hoyasala architectural style?

- Ans 1. Kesava Temple
 2. Ladkhan Temple
 3. Konark temple
 4. Khajuraho Temple

Question ID : 264330106256
Option 1 ID : 264330417326
Option 2 ID : 264330417328
Option 3 ID : 264330417325
Option 4 ID : 264330417327
Status : Answered
Chosen Option : 3

Q.33 From which of the following states/union territories does the Yamuna River originate?

- Ans 1. Uttar Pradesh
 2. Uttarakhand
 3. Jammu and Kashmir
 4. Himachal Pradesh

Question ID : 264330178009
Option 1 ID : 264330698113
Option 2 ID : 264330698114
Option 3 ID : 264330698112
Option 4 ID : 264330698111
Status : Answered
Chosen Option : 3

Q.34 Which of the following methods can be used for liberalisation?

- Ans 1. Increase in taxes
 2. Abolishing licensing requirement in most industries
 3. Making procedures for imports and exports tough
 4. Restrictions in fixing the prices of goods and services

Question ID : 264330116551
Option 1 ID : 264330458290
Option 2 ID : 264330458291
Option 3 ID : 264330458292
Option 4 ID : 264330458289
Status : Answered
Chosen Option : 2

Q.35 Playing It My Way: My Autobiography, is the book written by whom among the following cricketers?

- Ans 1. Kapil Dev
 2. Rahul Dravid
 3. Virat Kohli
 4. Sachin Tendulkar

Question ID : 264330112860
Option 1 ID : 264330443527
Option 2 ID : 264330443526
Option 3 ID : 264330443525
Option 4 ID : 264330443528
Status : Answered
Chosen Option : 4

Q.36 Dr. Atmaram Pandurang and Justice Ranade founded the _____ in Maharashtra espousing principles of enlightenment based on Vedas.

- Ans 1. Prarthana Samaj
 2. Bharat Dharma Mahamandal
 3. Brahmo Samaj
 4. Arya Samaj

Question ID : 264330112403
Option 1 ID : 264330441698
Option 2 ID : 264330441697
Option 3 ID : 264330441699
Option 4 ID : 264330441700
Status : Answered
Chosen Option : 1

Q.37 Which Indian dance form has the Mahari dance style?

- Ans 1. Kathak
 2. Kathakali
 3. Odissi
 4. Mohiniyattam

Question ID : 264330110406
Option 1 ID : 264330433904
Option 2 ID : 264330433901
Option 3 ID : 264330433902
Option 4 ID : 264330433903
Status : Not Answered
Chosen Option : --

Q.38 Which Article allows the Council of Ministers to aid and advise the President?

- Ans 1. Article 70
 2. Article 52
 3. Article 61
 4. Article 74

Question ID : 264330166140
Option 1 ID : 264330651629
Option 2 ID : 264330651627
Option 3 ID : 264330651628
Option 4 ID : 264330651630
Status : Answered
Chosen Option : 1

Q.39 The Brahmo Samaj, which promotes the principal of social equality, was founded by _____.

- Ans 1. Raja Ram Mohan Roy
 2. Debendranath Tagore
 3. Swami Vivekananda
 4. Swami Dayanand

Question ID : 264330112405
Option 1 ID : 264330441705
Option 2 ID : 264330441707
Option 3 ID : 264330441706
Option 4 ID : 264330441708
Status : Answered
Chosen Option : 1

Q.40 Which portal was launched by SIDBI to improve accessibility of credit and handholding services to MSMEs?

- Ans
- 1. Samadhan
 - 2. Udyami Mitra
 - 3. MSME Champions
 - 4. Sampark

Question ID : 264330111592
Option 1 ID : 264330438453
Option 2 ID : 264330438455
Option 3 ID : 264330438456
Option 4 ID : 264330438454
Status : Answered
Chosen Option : 2

Q.41 In which year was the Malegam Committee appointed to study issues and concerns of the Micro Finance Sector?

- Ans
- 1. 2010
 - 2. 2018
 - 3. 2015
 - 4. 2005

Question ID : 264330141457
Option 1 ID : 264330554164
Option 2 ID : 264330554166
Option 3 ID : 264330554165
Option 4 ID : 264330554163
Status : Not Answered
Chosen Option : --

Q.42 Identify the southernmost major port of India.

- Ans
- 1. Mangaluru
 - 2. Kochi
 - 3. Tuticorin
 - 4. Chennai

Question ID : 264330120318
Option 1 ID : 264330471523
Option 2 ID : 264330471525
Option 3 ID : 264330471526
Option 4 ID : 264330471524
Status : Not Answered
Chosen Option : --

Q.43 _____ has a curving shape, a feature found in Nagara architecture.

- Ans
- 1. Shikhara
 - 2. Antarala
 - 3. Mandapa
 - 4. Kutina

Question ID : 264330106254
Option 1 ID : 264330417317
Option 2 ID : 264330417320
Option 3 ID : 264330417319
Option 4 ID : 264330417318
Status : Not Answered
Chosen Option : --

Q.44 The Hunta dance of Jharkhand is associated with which tribal community?

- Ans 1. Oraon
 2. Munda
 3. Santhal
 4. Kol

Question ID : 264330141328
Option 1 ID : 264330553649
Option 2 ID : 264330553647
Option 3 ID : 264330553648
Option 4 ID : 264330553650
Status : Not Answered
Chosen Option : --

Q.45 Who was the author of the famous work 'Shishupala Vadha'?

- Ans 1. Jayadeva
 2. Bhatti
 3. Bharavi
 4. Magha

Question ID : 264330120284
Option 1 ID : 264330471390
Option 2 ID : 264330471388
Option 3 ID : 264330471387
Option 4 ID : 264330471389
Status : Answered
Chosen Option : 3

Q.46 Which of the following countries won the highest number of Kabaddi World Cups, as of 2022?

- Ans 1. Bangladesh
 2. India
 3. Pakistan
 4. Iran

Question ID : 264330118453
Option 1 ID : 264330465213
Option 2 ID : 264330465216
Option 3 ID : 264330465214
Option 4 ID : 264330465215
Status : Answered
Chosen Option : 2

Q.47 The Annapurna Scheme was launched by the Government of India in the year _____ for providing food security.

- Ans 1. 2002
 2. 2000
 3. 2001
 4. 2003

Question ID : 264330120342
Option 1 ID : 264330471620
Option 2 ID : 264330471622
Option 3 ID : 264330471621
Option 4 ID : 264330471619
Status : Not Answered
Chosen Option : --

Q.48 In which of the following years was the first edition of the Indian Super League (ISL) held?

- Ans
- 1. 2016
 - 2. 2013
 - 3. 2014
 - 4. 2015

Question ID : 264330118463
Option 1 ID : 264330465256
Option 2 ID : 264330465253
Option 3 ID : 264330465254
Option 4 ID : 264330465255
Status : Answered
Chosen Option : 4

Q.49 Who described India as a 'Quasi-Federation'?

- Ans
- 1. KC Wheare
 - 2. KM Munshi
 - 3. Harold Joseph Laski
 - 4. Ivor Jennings

Question ID : 264330110823
Option 1 ID : 264330435570
Option 2 ID : 264330435572
Option 3 ID : 264330435571
Option 4 ID : 264330435569
Status : Answered
Chosen Option : 2

Q.50 Which of the given statements about Vitamin A are correct?

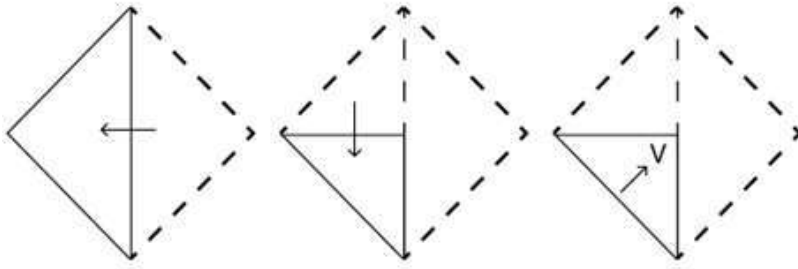
Statement A: Beta-carotene is a precursor to Vitamin A.

Statement B: Leafy green vegetables and yellow fruits are good sources of Vitamin A.

- Ans
- 1. Only Statement B
 - 2. Only Statement A
 - 3. Both Statements A and B
 - 4. Neither Statement A nor B

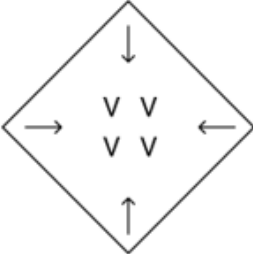
Question ID : 264330138002
Option 1 ID : 264330540618
Option 2 ID : 264330540616
Option 3 ID : 264330540615
Option 4 ID : 264330540617
Status : Not Answered
Chosen Option : --

Q.1 A square sheet of paper is folded along the dotted line successively along the directions shown and is then punched in the last. How would the paper look when unfolded?

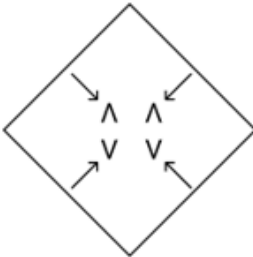


Ans

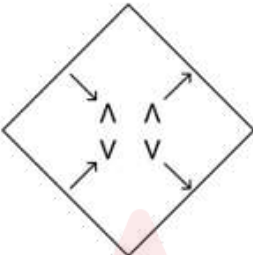
✗ 1.



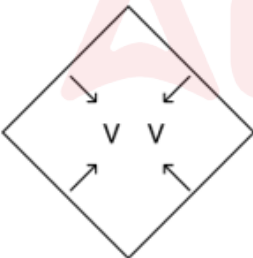
✓ 2.



✗ 3.



✗ 4.



Question ID : 264330172434

Option 1 ID : 264330676290

Option 2 ID : 264330676287

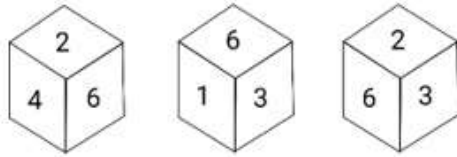
Option 3 ID : 264330676288

Option 4 ID : 264330676289

Status : Answered

Chosen Option : 2

Q.2 A cube (dice) has six different numbers drawn over its six faces. Three different positions of this cube are shown in the given figure. Which number is on the face opposite to '1'?



- Ans
- 1. 4
 - 2. 2
 - 3. 6
 - 4. 3

Question ID : 264330113150

Option 1 ID : 264330444688

Option 2 ID : 264330444686

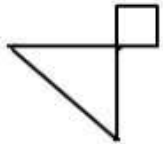
Option 3 ID : 264330444685

Option 4 ID : 264330444687

Status : Answered

Chosen Option : 2

Q.3 Select the option in which the given figure is embedded (rotation is NOT allowed).



Ans

- 1.
- 2.
- 3.
- 4.

Question ID : 264330106328

Option 1 ID : 264330417614

Option 2 ID : 264330417615

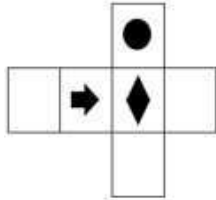
Option 3 ID : 264330417616

Option 4 ID : 264330417613

Status : Answered


Chosen Option : 4

Q.4 Choose the dice from the given options that is similar to the dice formed from the given sheet of paper (X).



(X)

Ans



Question ID : 264330111297

Option 1 ID : 264330437273

Option 2 ID : 264330437275

Option 3 ID : 264330437276

Option 4 ID : 264330437274

Status : Answered

Chosen Option : 2

Q.5 Which of the following letter clusters will replace the question mark (?) in the given series to make it logically complete?

DSB, GVV, JYV, MBS, ?

Ans ✓ 1. PEP

✗ 2. PDP

✗ 3. PEO

✗ 4. PEQ

Question ID : 264330102225

Option 1 ID : 264330401367

Option 2 ID : 264330401368

Option 3 ID : 264330401366

Option 4 ID : 264330401365

Status : Answered

Chosen Option : 1

Q.6 Six numbers, 1, 2, 3, 4, 5 and 6, are written on the different faces of a dice. Three different positions of the same dice are shown (Figures 1-3). Find the number on the face opposite to the face showing '4'.

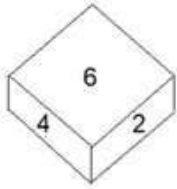


Figure 1

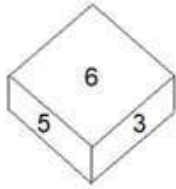


Figure 2

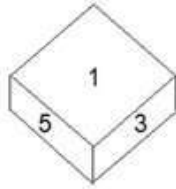


Figure 3

- Ans
- 1. 1
 - 2. 2
 - 3. 3
 - 4. 5

Question ID : 264330112582

Option 1 ID : 264330442415

Option 2 ID : 264330442413

Option 3 ID : 264330442416

Option 4 ID : 264330442414

Status : Answered

Chosen Option : 1

Q.7 Select the set in which the numbers are related in the same way as are the numbers of the following sets.

(NOTE : Operations should be performed on the whole numbers, without breaking down the numbers into its constituent digits. E.g. 13 – Operations on 13 such as adding /deleting /multiplying etc. to 13 can be performed. Breaking down 13 into 1 and 3 and then performing mathematical operations on 1 and 3 is not allowed.)

(33, 11, 66)

(45, 15, 90)

- Ans
- 1. (51, 19, 102)
 - 2. (51, 17, 104)
 - 3. (51, 17, 102)
 - 4. (53, 19, 102)

Question ID : 264330175038

Option 1 ID : 264330686530

Option 2 ID : 264330686527

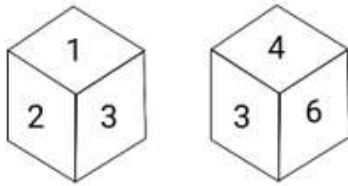
Option 3 ID : 264330686528

Option 4 ID : 264330686529

Status : Answered

Chosen Option : 3

Q.8 Six numbers, 1, 2, 3, 4, 5 and 6, are written on the different faces of a dice. Two positions of this dice are shown in the given figure. Find the number on the face opposite to 5.



Ans 1. 3

2. 1

3. 2

4. 6

Question ID : 264330106168

Option 1 ID : 264330416974

Option 2 ID : 264330416973

Option 3 ID : 264330416976

Option 4 ID : 264330416975

Status : Answered

Chosen Option : 1

Q.9 Select the option that is related to the fifth letter-cluster in the same way as the second letter-cluster is related to the first letter-cluster and the fourth letter-cluster is related to the third letter-cluster.

LINK : NKPM :: PART : RCTV :: PATH : ?

Ans 1. RCWJ

2. RBVK

3. NCVK

4. RCVJ

Question ID : 26433076462

Option 1 ID : 264330299915

Option 2 ID : 264330299912

Option 3 ID : 264330299914

Option 4 ID : 264330299913

Status : Answered

Chosen Option : 4

Q.10 Select the correct combination of mathematical signs that can sequentially replace the * signs and balance the given expression.

$72 * 5 * 7 * 64 * 8 * 45$

Ans 1. +, x, -, +, =

2. +, +, x, -, =

3. -, +, +, x, =

4. -, x, +, +, =

Question ID : 26433074789

Option 1 ID : 264330293246

Option 2 ID : 264330293244

Option 3 ID : 264330293245

Option 4 ID : 264330293247

Status : Answered

Chosen Option : 4

Q.11 Select the number from the given options that can replace the question mark (?) in the following series.
24, 21, 16, 13, 8, ?

- Ans 1. 2
 2. 5
 3. 7
 4. 3

Question ID : 264330106382
 Option 1 ID : 264330417831
 Option 2 ID : 264330417832
 Option 3 ID : 264330417829
 Option 4 ID : 264330417830
 Status : Answered
 Chosen Option : 2

Q.12 Which figure should replace the question mark (?) in the following series to continue the pattern?

△	3	3	S	B	△	△	U	
	B	U	U	H	S	9	9	3
S	H	△	B	U	3	B	S	?

Ans

1.

S	B
U	R
9	△

2.

S	B
△	R
U	9

3.

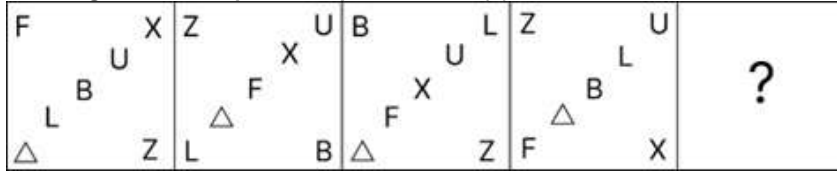
9	B
S	R
U	△

4.

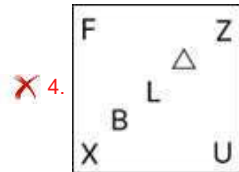
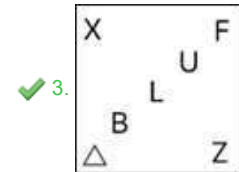
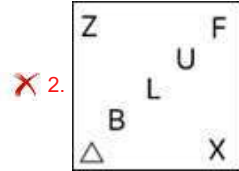
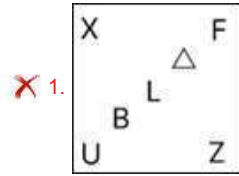
R	B
U	S
9	3

Question ID : 264330129628
 Option 1 ID : 264330507879
 Option 2 ID : 264330507878
 Option 3 ID : 264330507880
 Option 4 ID : 264330507881
 Status : Answered
 Chosen Option : 1

Q.13 Which figure should replace the question mark (?) if the series were to be continued?



Ans



Question ID : 264330130813

Option 1 ID : 264330512364

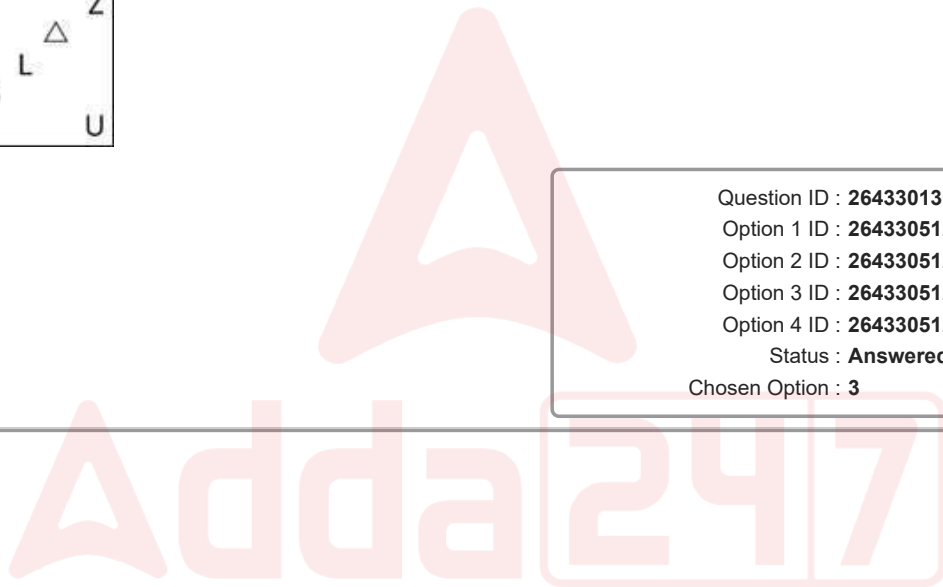
Option 2 ID : 264330512366

Option 3 ID : 264330512365

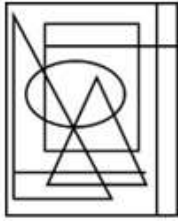
Option 4 ID : 264330512363

Status : Answered

Chosen Option : 3



Q.14 Select the option figure which is embedded in the given figure as its part (rotation is NOT allowed).



Ans

1.



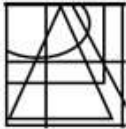
2.



3.



4.



Question ID : 264330116993

Option 1 ID : 264330460055

Option 2 ID : 264330460054

Option 3 ID : 264330460053

Option 4 ID : 264330460056

Status : Answered

Chosen Option : 2

Q.15 H, I, J, K and L are five people sitting in a straight line facing North. I sits exactly between J and K. K sits to the immediate left of H. L sits at the extreme right end. Who sits at the extreme left end?

Ans 1. J

2. I

3. H

4. K

Question ID : 26433090118

Option 1 ID : 264330353950

Option 2 ID : 264330353952

Option 3 ID : 264330353951

Option 4 ID : 264330353949

Status : Answered

Chosen Option : 1

Q.16 Select the option that is related to the fourth number in the same way as the first number is related to the second number and the fifth number is related to the sixth number.

7586 : 8943 :: ? : 6749 :: 8405 : 9762

Ans 1. 5412

2. 5392

3. 5586

4. 6321

Question ID : 26433052022

Option 1 ID : 264330203393

Option 2 ID : 264330203391

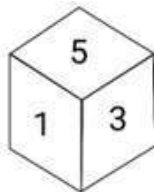
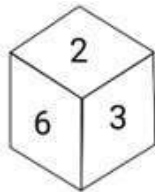
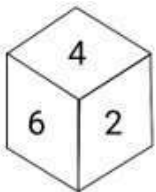
Option 3 ID : 264330203392

Option 4 ID : 264330203390

Status : Not Answered

Chosen Option : --

Q.17 Six numbers, 1, 2, 3, 4, 5 and 6 are written on different faces of a dice. Three positions of this dice are shown in here. Find the number on the face opposite 6.



Ans 1. 5

2. 4

3. 3

4. 1

Question ID : 264330106395

Option 1 ID : 264330417881

Option 2 ID : 264330417882

Option 3 ID : 264330417883

Option 4 ID : 264330417884

Status : Answered

Chosen Option : 1

Q.18 Given below is a series of figures – A, B, C and D which follow a particular pattern. Which of the given option figures should come in place of E to continue the series?



(A) (B) (C) (D) (E)

Ans

- 1.
- 2.
- 3.
- 4.

Question ID : 264330111292

Option 1 ID : 264330437256

Option 2 ID : 264330437253

Option 3 ID : 264330437254

Option 4 ID : 264330437255

Status : Answered

Chosen Option : 2

Q.19 In a certain code language, 'live long' is coded as 'east west', 'long pole' is coded as 'east south', 'star wars' is coded as 'ward four', and 'pole star' is coded as 'south ward'. What is the code for the word 'wars'?

- 1. long
- 2. ward
- 3. four
- 4. pole

Question ID : 26433082864

Option 1 ID : 264330325290

Option 2 ID : 264330325289

Option 3 ID : 264330325291

Option 4 ID : 264330325292

Status : Answered

Chosen Option : 3

Q.20 Two statements are given followed by two conclusions numbered I and II. Assuming the statements to be true, even if they seem to be at variance from commonly known facts, decide which of the conclusions logically follow(s) from the statements.

Statements:

Some Witches are Humans.

All Humans are Cold.

Conclusions:

I. All Witches are Cold.

II. Some Witches are Cold.

- Ans**
- 1. Neither conclusion I nor II follows.
 - 2. Both conclusions I and II follow.
 - 3. Only conclusion I follows.
 - 4. Only conclusion II follows.

Question ID : 26433076598

Option 1 ID : 264330300459

Option 2 ID : 264330300458

Option 3 ID : 264330300456

Option 4 ID : 264330300457

Status : Answered

Chosen Option : 4

Q.21 Select the correct mirror image of the given figure when the mirror is placed at PQ as shown below.

_+*&^\$W#@!# | ^P
|
_Q

- Ans**
- 1. **#!@#W\$^&*+_-**
 - 2. **#!@#M\$^&*+_-**
 - 3. **#!@#W\$^&*+_-**
 - 4. **#!@#W^&\$&*+_-**

Question ID : 26433082031

Option 1 ID : 264330321958

Option 2 ID : 264330321960

Option 3 ID : 264330321957

Option 4 ID : 264330321959

Status : Answered

Chosen Option : 3

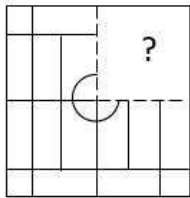
Q.22 Select the correct combination of mathematical signs that can sequentially replace the * signs and balance the given expression.

$$96 * 12 * 15 * 7 * 36 * 77$$

- Ans
- 1. -, +, +, x, =
 - 2. -, x, +, +, =
 - 3. +, +, x, -, =
 - 4. +, x, -, +, =

Question ID : 26433074790
 Option 1 ID : 264330293249
 Option 2 ID : 264330293251
 Option 3 ID : 264330293248
 Option 4 ID : 264330293250
 Status : Answered
 Chosen Option : 3

Q.23 Select the option figure that will replace the question mark (?) in the figure given below to complete the pattern.

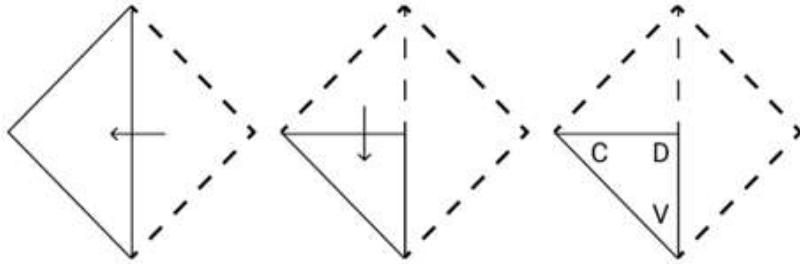


Ans

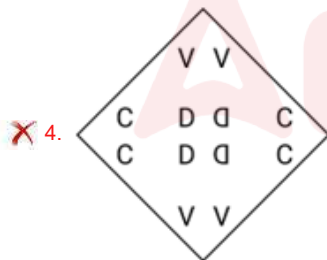
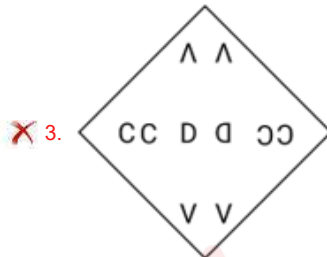
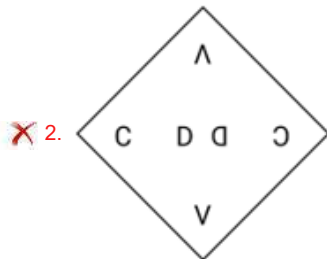
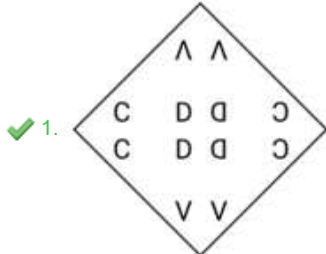
- 1.
- 2.
- 3.
- 4.

Question ID : 26433080832
 Option 1 ID : 264330317261
 Option 2 ID : 264330317263
 Option 3 ID : 264330317264
 Option 4 ID : 264330317262
 Status : Answered
 Chosen Option : 3

Q.24 A square sheet of paper is folded along the dotted line successively along the directions shown and is then punched in the last. How would the paper look when unfolded?



Ans



Question ID : 264330172437

Option 1 ID : 264330676301

Option 2 ID : 264330676299

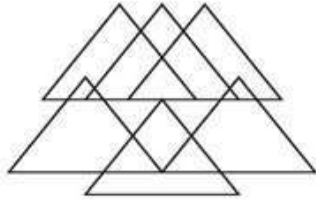
Option 3 ID : 264330676302

Option 4 ID : 264330676300

Status : Answered

Chosen Option : 1

Q.25 How many triangles are there in the given figure?



Ans 1. 19

2. 12

3. 15

4. 10

Question ID : 26433091704

Option 1 ID : 264330360184

Option 2 ID : 264330360182

Option 3 ID : 264330360183

Option 4 ID : 264330360181

Status : Answered

Chosen Option : 3

Section : Numerical Ability

Q.1 A dishonest financier claims to be lending money at simple interest, but he includes the interest every four months for calculating the principal. If he is charging an interest of 3%, the effective rate of interest becomes:

Ans 1. 3.01%

2. 2.01%

3. 3.03%

4. 2.06%

Question ID : 264330120039

Option 1 ID : 264330470412

Option 2 ID : 264330470414

Option 3 ID : 264330470411

Option 4 ID : 264330470413

Status : Not Answered

Chosen Option : --

Q.2 If the average of 6, 7, 12, (x - 1) and 10 is 10, then the value of x is:

Ans 1. 14

2. 12

3. 15

4. 16

Question ID : 264330129386

Option 1 ID : 264330506912

Option 2 ID : 264330506913

Option 3 ID : 264330506910

Option 4 ID : 264330506911

Status : Answered

Chosen Option : 4

Q.3 If $a : b = 5 : 3$, then $(a^3 - b^3) : (a^3 + b^3) = ?$

- Ans
- 1. 11 : 25
 - 2. 49 : 16
 - 3. 49 : 76
 - 4. 25 : 76

Question ID : 264330119336
Option 1 ID : 264330467632
Option 2 ID : 264330467633
Option 3 ID : 264330467631
Option 4 ID : 264330467634
Status : Answered
Chosen Option : 3

Q.4 Let a and b be two numbers such that a and $b - a$ are co-primes and b and $b + a$ are co-primes, respectively. Which of the followings is true?

- Ans
- 1. a and b are not co-prime
 - 2. b is prime
 - 3. a is prime
 - 4. a and b are co-prime

Question ID : 264330112064
Option 1 ID : 264330440344
Option 2 ID : 264330440343
Option 3 ID : 264330440341
Option 4 ID : 264330440342
Status : Answered
Chosen Option : 1

Q.5 P invested a certain amount in shares. The shares rose successively by 20% and 30% on two consecutive days and fell by 25% and 11% in the next two days. What is the percentage increase or decrease in the value of the shares in four days?

- Ans
- 1. Increase of 3.62%
 - 2. Increase of 4.13%
 - 3. Decrease of 4.13%
 - 4. Decrease of 3.62%

Question ID : 264330177577
Option 1 ID : 264330696426
Option 2 ID : 264330696424
Option 3 ID : 264330696423
Option 4 ID : 264330696425
Status : Not Answered
Chosen Option : --

Q.6 What is the number between 2800 and 3000, which when divided by 24, 32 and 45, leaves no remainder?

- Ans
- 1. 2960
 - 2. 2920
 - 3. 2840
 - 4. 2880

Question ID : 264330103650
Option 1 ID : 264330406908
Option 2 ID : 264330406905
Option 3 ID : 264330406907
Option 4 ID : 264330406906
Status : Answered
Chosen Option : 4

Q.7 Let $x = \frac{6}{7}$ and let $y = \frac{1}{x}$. y is _____ more than x .

- Ans
- 1. 36.11%
 - 2. 36.66%
 - 3. 33.66%
 - 4. 33.33%

Question ID : 264330112071
Option 1 ID : 264330440370
Option 2 ID : 264330440372
Option 3 ID : 264330440371
Option 4 ID : 264330440369
Status : Not Answered
Chosen Option : --

Q.8 If Anand can do a piece of work in 9 days and Vinod can complete the same work in 6 days, then in how many days will both of them complete it together?

- Ans
- 1. $\frac{1}{96}$ days
 - 2. $\frac{1}{6}$ days
 - 3. $\frac{18}{5}$ days
 - 4. $\frac{96}{5}$ days

Question ID : 264330104365
Option 1 ID : 264330409762
Option 2 ID : 264330409761
Option 3 ID : 264330409763
Option 4 ID : 264330409764
Status : Answered
Chosen Option : 3

Q.9 Vishy needs to paint the surfaces of three different spherical balls, having radii of 30 cm, 40 cm, and 50 cm, respectively. If the cost of paint needed to paint $\pi \text{ cm}^2$ is given as ₹0.60, what will be the total cost (in ₹) of the quantity of paint required to paint the surfaces of all the three balls mentioned above?

- Ans
- 1. 11700
 - 2. 12000
 - 3. 11400
 - 4. 12600

Question ID : 264330112560
Option 1 ID : 264330442326
Option 2 ID : 264330442327
Option 3 ID : 264330442328
Option 4 ID : 264330442325
Status : Answered
Chosen Option : 4

Q.10 Simplify the following.

$$\sqrt{\frac{0.009 \times 0.025 \times 0.016 \times 0.08}{0.002 \times 0.0008 \times 0.0002}}$$

- Ans
- 1. 16
 - 2. 18
 - 3. 72
 - 4. 30

Question ID : 264330118120
Option 1 ID : 264330464295
Option 2 ID : 264330464296
Option 3 ID : 264330464298
Option 4 ID : 264330464297
Status : Not Answered
Chosen Option : --

Q.11 The marked price of an item is $\frac{9}{8}$ of the cost price. How much percentage discount should be offered to get a profit of 3%?

- Ans
- 1. 5.44%
 - 2. 7.44%
 - 3. 8.44%
 - 4. 6.44%

Question ID : 264330117923
Option 1 ID : 264330463507
Option 2 ID : 264330463509
Option 3 ID : 264330463508
Option 4 ID : 264330463510
Status : Not Answered
Chosen Option : --

Q.12 If the circumference of the great circle of a hemisphere is 9π cm, then find the total surface area of the hemisphere?

- Ans
- 1. $54.85\pi \text{ cm}^2$
 - 2. $60.75\pi \text{ cm}^2$
 - 3. $62.35\pi \text{ cm}^2$
 - 4. $50.65\pi \text{ cm}^2$

Question ID : 264330117944
Option 1 ID : 264330463593
Option 2 ID : 264330463592
Option 3 ID : 264330463594
Option 4 ID : 264330463591
Status : Not Answered
Chosen Option : --

Q.13 The difference between the compound interest and the simple interest on ₹80,000 at the same rate of interest per annum for 2 years is ₹98. What is the rate of interest per annum?

- Ans
- 1. $7\frac{1}{2}\%$
 - 2. $5\frac{1}{2}\%$
 - 3. $2\frac{1}{2}\%$
 - 4. $3\frac{1}{2}\%$

Question ID : 264330104528
Option 1 ID : 264330410416
Option 2 ID : 264330410414
Option 3 ID : 264330410413
Option 4 ID : 264330410415
Status : Not Answered
Chosen Option : --

Q.14 A machine is sold for ₹4,800 at a gain of 20%. What would have been the gain or loss percentage if it had been sold for ₹4,500?

- Ans
- 1. 25% gain
 - 2. 25% loss
 - 3. 12.5% gain
 - 4. 12.5% loss

Question ID : 264330104245
Option 1 ID : 264330409284
Option 2 ID : 264330409282
Option 3 ID : 264330409283
Option 4 ID : 264330409281
Status : Answered
Chosen Option : 3

Q.15 A train covers a distance of 54 km from station A to station G in an hour via stations B, C, D, E and F. On each station, the train stops for 72 seconds. What is the speed of the train in km/h?

- Ans
- 1. 64
 - 2. 62
 - 3. 58
 - 4. 60

Question ID : 264330112110
Option 1 ID : 264330440527
Option 2 ID : 264330440526
Option 3 ID : 264330440528
Option 4 ID : 264330440525
Status : Answered
Chosen Option : 4

Section : Computer Proficiency

Q.1 Which of the following options can be used when we need to retype the same text as it reduces time and effort in MS Word 365?

- Ans
- 1. Replace
 - 2. Find
 - 3. Copy
 - 4. Cut

Question ID : 264330180447
Option 1 ID : 264330707758
Option 2 ID : 264330707757
Option 3 ID : 264330707756
Option 4 ID : 264330707755
Status : Answered
Chosen Option : 3

Q.2 In MS Excel 365, which alignment option in Microsoft Excel is used to align the text to both the left and right sides of the cell, creating a neat and justified appearance?

- Ans
- 1. Right Align
 - 2. Justify
 - 3. Centre Align
 - 4. Left Align

Question ID : 264330173311
Option 1 ID : 264330679724
Option 2 ID : 264330679726
Option 3 ID : 264330679725
Option 4 ID : 264330679723
Status : Answered
Chosen Option : 3

Q.3 Which of the following fields tells the recipient what the message is about?

- Ans
- 1. Date
 - 2. To
 - 3. Subject
 - 4. Signature

Question ID : 264330178238
Option 1 ID : 264330699010
Option 2 ID : 264330699008
Option 3 ID : 264330699007
Option 4 ID : 264330699009
Status : Answered
Chosen Option : 3

Q.4 In MS word 365, What does the 'Number of Copies' option in the Print Settings dialog allow you to do?

- Ans
- 1. Specify how many copies of the document to print
 - 2. Choose the paper size
 - 3. Adjust the font size
 - 4. Specify the number of pages to print

Question ID : 264330180725
Option 1 ID : 264330708870
Option 2 ID : 264330708868
Option 3 ID : 264330708867
Option 4 ID : 264330708869
Status : Answered
Chosen Option : 1

Q.5 In MS word 365, what is the keyboard shortcut to copy selected text in most applications?

- Ans
- 1. Ctrl + X
 - 2. Ctrl + Z
 - 3. Ctrl + C
 - 4. Ctrl + V

Question ID : 264330178572
Option 1 ID : 264330700316
Option 2 ID : 264330700318
Option 3 ID : 264330700315
Option 4 ID : 264330700317
Status : Answered
Chosen Option : 3

Q.6 Which of the following is NOT a text alignment in MS-Word 365?

- Ans
- 1. Align Text Middle
 - 2. Align Text Center
 - 3. Align Text Right
 - 4. Align Text Justify

Question ID : 264330178267
Option 1 ID : 264330699126
Option 2 ID : 264330699123
Option 3 ID : 264330699124
Option 4 ID : 264330699125
Status : Answered
Chosen Option : 1

Q.7 In MS Excel 365 what does the 'Save As' option allow you to do that the regular 'Save' option does not?

- Ans
- 1. Save the workbook with a new name or location
 - 2. Save the workbook without any changes
 - 3. Save the workbook with the same name
 - 4. Save the workbook without confirmation

Question ID : 264330180685

Option 1 ID : 264330708708

Option 2 ID : 264330708709

Option 3 ID : 264330708707

Option 4 ID : 264330708710

Status : Answered

Chosen Option : 1

Q.8 एमएस वर्ड 365 (MS Word 365) में, पेज सेटअप समूह में ब्रेक के बाद टेक्स्ट को नए पेज या डॉक्यूमेंट पर शुरू करने के लिए फोर्स करने हेतु निम्नलिखित में से किसका उपयोग किया जाता है?

- Ans
- 1. पेज ब्रेक (Page Break)
 - 2. पेज साइज (Page Size)
 - 3. पेज मार्जिन (Page Margins)
 - 4. ओरिएंटेशन Orientation)

Question ID : 264330182772

Option 1 ID : 264330716861

Option 2 ID : 264330716860

Option 3 ID : 264330716859

Option 4 ID : 264330716862

Status : Answered

Chosen Option : 1

Q.9 The term 'ISP' stands for _____, in the context of internet architecture.

- Ans
- 1. Internet Service Protocol
 - 2. International Service Provider
 - 3. Intranet Service Provider
 - 4. Internet Service Provider

Question ID : 264330182102

Option 1 ID : 264330714249

Option 2 ID : 264330714248

Option 3 ID : 264330714247

Option 4 ID : 264330714250

Status : Answered

Chosen Option : 4

Q.10 Which of the following is the correct combination of a column letter and a row number that identifies a cell on a worksheet in MS Excel?

- Ans
- 1. 33
 - 2. AA
 - 3. A3
 - 4. 3A

Question ID : 264330180397

Option 1 ID : 264330707557

Option 2 ID : 264330707558

Option 3 ID : 264330707555

Option 4 ID : 264330707556

Status : Answered

Chosen Option : 4



Constable Executive Male and Female in Delhi Police Examination 2023

Roll Number	
Candidate Name	
Venue Name	iON Digital Zone iDZ 1 Sikandra
Exam Date	17/11/2023
Exam Time	9:00 AM - 10:30 AM
Subject	Constable Executive Male and Female in Delhi Police Examination 2023

Section : **General Knowledge**

Q.1 Which of the following dates is correct with regard to the announcement of LPG model?

- Ans**
- 1. August 1991
 - 2. July 1991
 - 3. June 1991
 - 4. December 1991

Question ID : 264330111610
Option 1 ID : 264330438528
Option 2 ID : 264330438526
Option 3 ID : 264330438527
Option 4 ID : 264330438525
Status : Answered
Chosen Option : 3

Q.2 Who among the following has written the novel 'Pinjar'?

- Ans**
- 1. Bhisham Sahani
 - 2. Mohan Rakesh
 - 3. Amrita Pritam
 - 4. Mannu Bhandari

Question ID : 26433071476
Option 1 ID : 264330280329
Option 2 ID : 264330280330
Option 3 ID : 264330280328
Option 4 ID : 264330280331
Status : Answered
Chosen Option : 2

Q.3 The _____ was abruptly called off by Mahatma Gandhi due to the Chauri Chaura incident.

- Ans**
- 1. Kheda Movement
 - 2. Rowlatt Act Satyagraha
 - 3. Non-cooperation Movement
 - 4. Champaran Satyagraha

Question ID : 264330114102
Option 1 ID : 264330448495
Option 2 ID : 264330448496
Option 3 ID : 264330448493
Option 4 ID : 264330448494
Status : Answered
Chosen Option : 4

Q.4 Torrential rain is any amount of rain that is considered especially heavy. Accordingly, which of the following Indian regions receives this type of rainfall during October and November?

- Ans
- 1. Western Rajasthan
 - 2. Southeast Karnataka
 - 3. North Bengal
 - 4. Central Maharashtra

Question ID : 264330114163
Option 1 ID : 264330448739
Option 2 ID : 264330448737
Option 3 ID : 264330448740
Option 4 ID : 264330448738
Status : Not Answered
Chosen Option : --

Q.5 Who among the following is known as the 'Shehnai maestro'?

- Ans
- 1. Ustad Bismillah Khan
 - 2. Ustad Bade Ghulam Ali Khan
 - 3. Hariprasad Chaurasia
 - 4. Ustad Amjad Ali Khan

Question ID : 264330116424
Option 1 ID : 264330457781
Option 2 ID : 264330457782
Option 3 ID : 264330457783
Option 4 ID : 264330457784
Status : Answered
Chosen Option : 4

Q.6 Which of the following new words were added to Indian Constitution by the 42nd Constitutional Amendment Act?

- A. Socialist
- B. Integrity
- C. Fraternity
- D. Secular
- E. Equality

- Ans
- 1. A, D and E only
 - 2. B, C and D only
 - 3. A, B and D only
 - 4. A, C and D only

Question ID : 264330114744
Option 1 ID : 264330451062
Option 2 ID : 264330451064
Option 3 ID : 264330451061
Option 4 ID : 264330451063
Status : Answered
Chosen Option : 3

Q.7 Small scale industries in 1950 were defined as all those industries in which the maximum investment was _____ lakh rupees.

- Ans
- 1. ten
 - 2. fifty
 - 3. five
 - 4. twenty

Question ID : 264330110173
Option 1 ID : 264330432969
Option 2 ID : 264330432971
Option 3 ID : 264330432970
Option 4 ID : 264330432972
Status : Answered
Chosen Option : 3

Q.8 What type of architecture was constructed in Hampi temples and palaces?

- Ans
- 1. Vesara
 - 2. Kalinga
 - 3. Nagara
 - 4. Dravidian

Question ID : 264330106241
Option 1 ID : 264330417268
Option 2 ID : 264330417267
Option 3 ID : 264330417266
Option 4 ID : 264330417265
Status : Not Answered
Chosen Option : --

Q.9 When the total expenditure is less than total receipts, it is called _____.

- Ans
- 1. surplus budget
 - 2. balanced budget
 - 3. deficit budget
 - 4. estimate budget

Question ID : 264330120861
Option 1 ID : 264330473659
Option 2 ID : 264330473661
Option 3 ID : 264330473660
Option 4 ID : 264330473662
Status : Answered
Chosen Option : 1

Q.10 Which Indian dance form is Darshana Jhaveri the leading exponent of?

- Ans
- 1. Odissi
 - 2. Kuchipudi
 - 3. Kathak
 - 4. Manipuri

Question ID : 26433086936
Option 1 ID : 264330341386
Option 2 ID : 264330341388
Option 3 ID : 264330341387
Option 4 ID : 264330341385
Status : Not Answered
Chosen Option : --

Q.11 Which of the following string instruments is played by Braj Bhushan Kabra?

- Ans 1. Mohan Veena
 2. Sitar
 3. Guitar
 4. Violin

Question ID : 264330111945
Option 1 ID : 264330439868
Option 2 ID : 264330439867
Option 3 ID : 264330439866
Option 4 ID : 264330439865
Status : Not Answered
Chosen Option : --

Q.12 Which species of Arthropods is horseshoe shaped, with hard shell and spine-like tail?

- Ans 1. Loligo
 2. Locusta
 3. Limulus
 4. Laccifer

Question ID : 264330166174
Option 1 ID : 264330651765
Option 2 ID : 264330651766
Option 3 ID : 264330651763
Option 4 ID : 264330651764
Status : Not Answered
Chosen Option : --

Q.13 Theyyam dance, performed to appease and make peace with the Gods who ensure good harvest and prosperity, is popular in which of the following states?

- Ans 1. Karnataka
 2. Kerala
 3. Jharkhand
 4. Andhra Pradesh

Question ID : 264330110434
Option 1 ID : 264330434015
Option 2 ID : 264330434016
Option 3 ID : 264330434013
Option 4 ID : 264330434014
Status : Answered
Chosen Option : 4

Q.14 Which Article of the Indian Constitution provides for an Independent Election Commission for the superintendence, direction and control of the electoral roll and the conduct of elections in India?

- Ans 1. Article 320
 2. Article 324
 3. Article 323
 4. Article 329

Question ID : 264330158676
Option 1 ID : 264330622063
Option 2 ID : 264330622065
Option 3 ID : 264330622064
Option 4 ID : 264330622066
Status : Answered
Chosen Option : 2

Q.15 Who among the following was the leader of 1857 revolt in Ramgarh state?

- Ans
- 1. Zinat Mahal
 - 2. Uda Devi
 - 3. Jhalkaribai
 - 4. Avantibai Lodhi

Question ID : 264330114114
Option 1 ID : 264330448544
Option 2 ID : 264330448541
Option 3 ID : 264330448542
Option 4 ID : 264330448543
Status : Answered
Chosen Option : 1

Q.16 The Green Revolution was commenced under the leadership of whom among the following Prime Ministers of India?

- Ans
- 1. Gulzarilal Nanda
 - 2. Charan Singh
 - 3. Morarji Desai
 - 4. Lal Bahadur Shastri

Question ID : 264330116532
Option 1 ID : 264330458215
Option 2 ID : 264330458214
Option 3 ID : 264330458213
Option 4 ID : 264330458216
Status : Answered
Chosen Option : 3

Q.17 In which case did the court rule that Parliament CANNOT amend the basic structure of the Constitution?

- Ans
- 1. Balbir Mehta Case
 - 2. Ashok Mehta Case
 - 3. Kesavananda Bharti Case
 - 4. Golaknath Case

Question ID : 264330168211
Option 1 ID : 264330659721
Option 2 ID : 264330659722
Option 3 ID : 264330659719
Option 4 ID : 264330659720
Status : Answered
Chosen Option : 3

Q.18 Who among the following headed the Constitutional States Committee formed for negotiating with the states?

- Ans
- 1. Dr. Rajendra Prasad
 - 2. Jawaharlal Nehru
 - 3. JB Kripalani
 - 4. Vallabhbai Patel

Question ID : 264330113366
Option 1 ID : 264330445549
Option 2 ID : 264330445551
Option 3 ID : 264330445552
Option 4 ID : 264330445550
Status : Answered
Chosen Option : 4

Q.19 The Rohtasgarh or Rohtas Fort is located in which river valley?

- Ans 1. Son
 2. Ganga
 3. Karmanasa
 4. Ghaghara

Question ID : 264330117687
Option 1 ID : 264330462745
Option 2 ID : 264330462743
Option 3 ID : 264330462746
Option 4 ID : 264330462744
Status : Not Answered
Chosen Option : --

Q.20 What is the integration between countries through foreign trade and foreign investments by multinational corporations (MNCs)?

- Ans 1. World trade
 2. International trade
 3. Globalisation
 4. International investment

Question ID : 264330110002
Option 1 ID : 264330432288
Option 2 ID : 264330432285
Option 3 ID : 264330432286
Option 4 ID : 264330432287
Status : Answered
Chosen Option : 2

Q.21 Under which of the following Writs can the Supreme Court and the High Courts call for the record of a case from a lower court or semi-judicial body on an allegation of an excess of jurisdiction?

- Ans 1. Mandamus
 2. Prohibition
 3. Certiorari
 4. Quo Warranto

Question ID : 264330134572
Option 1 ID : 264330527244
Option 2 ID : 264330527243
Option 3 ID : 264330527246
Option 4 ID : 264330527245
Status : Answered
Chosen Option : 2

Q.22 During the Mauryan period, Kalinga was the ancient name of which dominant present-day coastal state?

- Ans
- 1. Andhra Pradesh
 - 2. Tamil Nadu
 - 3. Odisha
 - 4. Karnataka

Question ID : 264330183093
Option 1 ID : 264330718104
Option 2 ID : 264330718105
Option 3 ID : 264330718106
Option 4 ID : 264330718107
Status : Answered
Chosen Option : 2

Q.23 As of October 2022, in which of the following Harappan cities was the Citadel NOT walled off?

- Ans
- 1. Harappa
 - 2. Lothal
 - 3. Kalibangan
 - 4. Mohenjo-Daro

Question ID : 264330109640
Option 1 ID : 264330430837
Option 2 ID : 264330430839
Option 3 ID : 264330430840
Option 4 ID : 264330430838
Status : Answered
Chosen Option : 3

Q.24 Who was the leader of the French forces during the second Carnatic War?

- Ans
- 1. John Ferro
 - 2. Albert Newman
 - 3. Daniel Samuel
 - 4. Joseph Francois Dupleix

Question ID : 264330166873
Option 1 ID : 264330654527
Option 2 ID : 264330654530
Option 3 ID : 264330654528
Option 4 ID : 264330654529
Status : Answered
Chosen Option : 4

Q.25 Who among the following was the author of Buddhacharita?

- Ans
- 1. Jinasena
 - 2. Shudraka
 - 3. Dandin
 - 4. Ashvaghosha

Question ID : 264330182699
Option 1 ID : 264330716569
Option 2 ID : 264330716568
Option 3 ID : 264330716570
Option 4 ID : 264330716567
Status : Answered
Chosen Option : 2

Q.26 The process of browning of sugar used extensively in cooking for the resulting sweet nutty flavour and brown colour is called:

- Ans**
- 1. pasteurisation
 - 2. neutralisation
 - 3. sterilisation
 - 4. caramelisation

Question ID : 26433011908
Option 1 ID : 264330439720
Option 2 ID : 264330439717
Option 3 ID : 264330439718
Option 4 ID : 264330439719
Status : Answered
Chosen Option : 4

Q.27 In which state is the Seshachalam Biosphere Reserve located?

- Ans**
- 1. Andhra Pradesh
 - 2. Maharashtra
 - 3. Gujarat
 - 4. Tamil Nadu

Question ID : 264330173629
Option 1 ID : 264330680996
Option 2 ID : 264330680997
Option 3 ID : 264330680995
Option 4 ID : 264330680998
Status : Answered
Chosen Option : 1

Q.28 The term 'anchor runner' is related to _____.

- Ans**
- 1. steeple chase
 - 2. 1500 m race
 - 3. relay race
 - 4. marathon race

Question ID : 264330110394
Option 1 ID : 264330433856
Option 2 ID : 264330433854
Option 3 ID : 264330433855
Option 4 ID : 264330433853
Status : Answered
Chosen Option : 3

Q.29 Olympian boxer Vijender Singh belongs to which of the following states?

- Ans**
- 1. Haryana
 - 2. Chandigarh
 - 3. Delhi
 - 4. Punjab

Question ID : 264330118440
Option 1 ID : 264330465162
Option 2 ID : 264330465164
Option 3 ID : 264330465161
Option 4 ID : 264330465163
Status : Answered
Chosen Option : 1

Q.30 As of the December 2022, which of the following cities of India was NOT a Railway Zone?

- Ans
- 1. Hajipur
 - 2. Bilaspur
 - 3. Jabalpur
 - 4. Udaipur

Question ID : 264330178720
Option 1 ID : 264330700907
Option 2 ID : 264330700908
Option 3 ID : 264330700910
Option 4 ID : 264330700909
Status : Answered
Chosen Option : 1

Q.31 Who among the following personalities is an awardee of Sahitya Natak Akademi for his contribution to the Chhau dance?

- Ans
- 1. Chandra Shekhar Bhanj
 - 2. Radha Reddy
 - 3. Reba Vidyarthi
 - 4. Chandralekha

Question ID : 264330120412
Option 1 ID : 264330471902
Option 2 ID : 264330471899
Option 3 ID : 264330471901
Option 4 ID : 264330471900
Status : Answered
Chosen Option : 1

Q.32 Maintenance functions of a living organism is a _____ process.

- Ans
- 1. continuous
 - 2. long time
 - 3. one time
 - 4. short time

Question ID : 264330113323
Option 1 ID : 264330445380
Option 2 ID : 264330445379
Option 3 ID : 264330445377
Option 4 ID : 264330445378
Status : Answered
Chosen Option : 1

Q.33 The first Indian Factories Act 1881 was mainly related to which subject?

- Ans
- 1. Child labour
 - 2. Woman labour
 - 3. Wages rate
 - 4. Equal work equal pay

Question ID : 264330114040
Option 1 ID : 264330448246
Option 2 ID : 264330448245
Option 3 ID : 264330448247
Option 4 ID : 264330448248
Status : Answered
Chosen Option : 1

Q.34 According to the census of India 2011, which of the following religions has the least population?

- Ans
- 1. Christians
 - 2. Buddhists
 - 3. Jains
 - 4. Sikhs

Question ID : 264330120329
Option 1 ID : 264330471567
Option 2 ID : 264330471569
Option 3 ID : 264330471568
Option 4 ID : 264330471570
Status : Answered
Chosen Option : 2

Q.35 The term 'scoop' is related to which of the following games?

- Ans
- 1. Boxing
 - 2. Hockey
 - 3. Badminton
 - 4. Football

Question ID : 264330130642
Option 1 ID : 264330511680
Option 2 ID : 264330511679
Option 3 ID : 264330511682
Option 4 ID : 264330511681
Status : Answered
Chosen Option : 2

Q.36 Secunderabad is the headquarters of which railway zone?

- Ans
- 1. West Central Railway Zone
 - 2. Southern Railway Zone
 - 3. North Central Railway Zone
 - 4. South Central Railway Zone

Question ID : 264330178718
Option 1 ID : 264330700900
Option 2 ID : 264330700899
Option 3 ID : 264330700902
Option 4 ID : 264330700901
Status : Not Answered
Chosen Option : --

Q.37 'As I Lay Dying' is an English novel by which of the following authors?

- Ans
- 1. William Faulkner
 - 2. John Dos Passos
 - 3. Stella Gibbons
 - 4. Aldous Huxley

Question ID : 26433055377
Option 1 ID : 264330216495
Option 2 ID : 264330216492
Option 3 ID : 264330216493
Option 4 ID : 264330216494
Status : Not Answered
Chosen Option : --

Q.38 According to Census of India 2011, which of the following states recorded a population density of less than 100 persons/sq. km?

- Ans
- 1. Rajasthan
 - 2. Sikkim
 - 3. Odisha
 - 4. Assam

Question ID : 264330183157
Option 1 ID : 264330718363
Option 2 ID : 264330718362
Option 3 ID : 264330718360
Option 4 ID : 264330718361
Status : Answered
Chosen Option : 2

Q.39 At which of the following events did Punjab's Devansh Jagga break the national record in the Under-16 Discus Throw Competition?

- Ans
- 1. 34th AFI National Junior Athletics Championship
 - 2. 35th AFI National Junior Athletics Championship
 - 3. 36th AFI National Junior Athletics Championship
 - 4. 37th AFI National Junior Athletics Championship

Question ID : 264330113745
Option 1 ID : 264330447067
Option 2 ID : 264330447066
Option 3 ID : 264330447065
Option 4 ID : 264330447068
Status : Answered
Chosen Option : 3

Q.40 What is the range of temperature on the surface of the Moon with no atmosphere?

- Ans
- 1. -110°C to 190°C
 - 2. -190°C to 110°C
 - 3. -80°C to 150°C
 - 4. -50°C to 120°C

Question ID : 264330134895
Option 1 ID : 264330528516
Option 2 ID : 264330528515
Option 3 ID : 264330528517
Option 4 ID : 264330528518
Status : Answered
Chosen Option : 3

Q.41 Which committee was appointed by the Government of India "to operationalise the suggestions to teach Fundamental Duties to the citizens of India" ?

- Ans
- 1. Justice BN Srikrishna Committee
 - 2. Justice Usha Mehra Committee
 - 3. Justice AK Mathur Committee
 - 4. Justice JS Verma Committee

Question ID : 264330110035
Option 1 ID : 264330432420
Option 2 ID : 264330432418
Option 3 ID : 264330432419
Option 4 ID : 264330432417
Status : Answered
Chosen Option : 1

Q.42 When is Kali Pooja celebrated in West Bengal region?

- Ans 1. Kartika Amavasya
 2. Kartika Poornima
 3. Ashwin Amavasya
 4. Ashwin Poornima

Question ID : 264330110466
Option 1 ID : 264330434143
Option 2 ID : 264330434142
Option 3 ID : 264330434141
Option 4 ID : 264330434144
Status : Answered
Chosen Option : 2

Q.43 To remove unemployment through skill development, how much expenditure is permissible per person on training of the urban poor, under the Deen Dayal Antyodaya Yojana?

- Ans 1. ₹12,000
 2. ₹20,000
 3. ₹8,000
 4. ₹15,000

Question ID : 264330120380
Option 1 ID : 264330471774
Option 2 ID : 264330471773
Option 3 ID : 264330471771
Option 4 ID : 264330471772
Status : Answered
Chosen Option : 1

Q.44 A reaction wherein atoms of an element in the reactants are exchanged or replaced to form new elements in the product is called:

- Ans 1. oxidation
 2. addition reaction
 3. substitution reaction
 4. combustion

Question ID : 264330177016
Option 1 ID : 264330694261
Option 2 ID : 264330694259
Option 3 ID : 264330694260
Option 4 ID : 264330694262
Status : Answered
Chosen Option : 3

Q.45 Which of the following concepts refers to the income earned by the factors of production at factor cost in the form of wages, profits, rent, interest, etc., within the domestic territory of a country?

- Ans
- 1. Net Domestic Product at Market Prices
 - 2. Net Domestic Product at Factor Cost
 - 3. Gross Domestic Product at Market Prices
 - 4. Gross National Product at Factor Cost

Question ID : 264330111569
Option 1 ID : 264330438362
Option 2 ID : 264330438364
Option 3 ID : 264330438361
Option 4 ID : 264330438363
Status : Answered
Chosen Option : 2

Q.46 The Speaker and the Deputy Speaker of a state are elected by the _____.

- Ans
- 1. Attorney General
 - 2. Chief Justice of Supreme Court
 - 3. Members of the Legislative Assembly
 - 4. Chief Justice of High Court

Question ID : 26433086865
Option 1 ID : 264330341104
Option 2 ID : 264330341101
Option 3 ID : 264330341103
Option 4 ID : 264330341102
Status : Answered
Chosen Option : 3

Q.47 Who among the following Sultans of Delhi established Turkan-i-Chahalgani?

- Ans
- 1. Ghiyasuddin Balban
 - 2. Bhalol Lodhi
 - 3. Iltutmish
 - 4. Alauddin Khilji

Question ID : 264330114828
Option 1 ID : 264330451398
Option 2 ID : 264330451399
Option 3 ID : 264330451397
Option 4 ID : 264330451400
Status : Not Answered
Chosen Option : --

Q.48 Yamini Krishnamurthy, an eminent _____ and Bharatanatyam dancer has been awarded the Padma Bhushan and Padma Shri.

- Ans
- 1. Kathakali
 - 2. Kuchipudi
 - 3. Kathak
 - 4. Sattriya

Question ID : 264330111980
Option 1 ID : 264330440006
Option 2 ID : 264330440007
Option 3 ID : 264330440005
Option 4 ID : 264330440008
Status : Answered
Chosen Option : 1

Q.49 'Azadi ka Amrit Mahotsav' started how many weeks before the 15th August 2023 celebration?

- Ans 1. 75 weeks
 2. 25 weeks
 3. 50 weeks
 4. 100 weeks

Question ID : 264330141784
Option 1 ID : 264330555458
Option 2 ID : 264330555455
Option 3 ID : 264330555457
Option 4 ID : 264330555456
Status : Answered
Chosen Option : 2

Q.50 Which ministry is implementing the 'PM DAKSH' scheme?

- Ans 1. Ministry of Finance
 2. Ministry of Social Justice and Empowerment
 3. Ministry of Micro, Small and Medium Enterprises
 4. Ministry of Education

Question ID : 264330111586
Option 1 ID : 264330438430
Option 2 ID : 264330438432
Option 3 ID : 264330438431
Option 4 ID : 264330438429
Status : Answered
Chosen Option : 2

Section : Reasoning

Q.1 Which of the following terms will replace the question mark (?) in the given series?
GOM, INO, KMQ, MLS, ?

- Ans 1. OJV
 2. NKV
 3. NJU
 4. OKU

Question ID : 264330102178
Option 1 ID : 264330401179
Option 2 ID : 264330401178
Option 3 ID : 264330401180
Option 4 ID : 264330401177
Status : Answered
Chosen Option : 4

Q.2 Select the option that is related to the third word in the same way as the second word is related to the first word. (The words must be considered as meaningful English words and must NOT be related to each other based on the number of letters/number of consonants/vowels in the word)

Swing : Garden :: Stars : ?

- Ans 1. Sky
 2. Camera
 3. Light
 4. Sun

Question ID : 26433069138
Option 1 ID : 264330271064
Option 2 ID : 264330271065
Option 3 ID : 264330271067
Option 4 ID : 264330271066
Status : Answered
Chosen Option : 1

Q.3 Select the number from among the given options that can replace the question mark (?) in the following series.

1, 13, 85, 517, 3109, ?

- Ans 1. 31456
 2. 19834
 3. 18661
 4. 18000

Question ID : 264330109746
Option 1 ID : 264330431264
Option 2 ID : 264330431262
Option 3 ID : 264330431263
Option 4 ID : 264330431261
Status : Answered
Chosen Option : 3

Q.4 How many triangles are there in the given figure?



- Ans 1. 4
 2. 5
 3. 6
 4. 7

Question ID : 26433085410
Option 1 ID : 264330335341
Option 2 ID : 264330335343
Option 3 ID : 264330335344
Option 4 ID : 264330335342
Status : Answered
Chosen Option : 4

Q.5 Select the correct mirror image of the given figure when the mirror is placed at PQ as shown below.

ARC(-=ANE_? 

Ans

1. ARC(-=ANE_?

2. ARC(-=ANE_?

3. ARC(-=ANE_?

4. ARC(-=ANE_?

Question ID : 26433082030

Option 1 ID : 264330321956


Option 2 ID : 264330321954

Option 3 ID : 264330321953

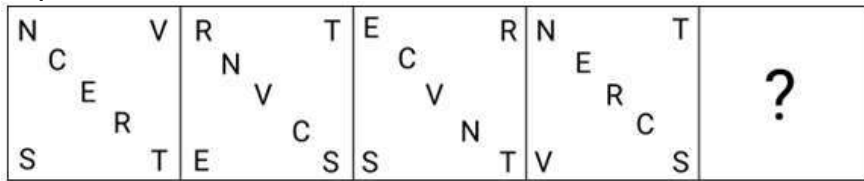
Option 4 ID : 264330321955

Status : Answered

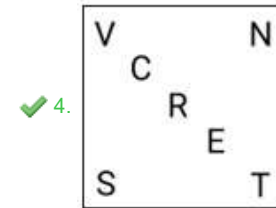
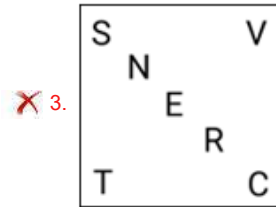
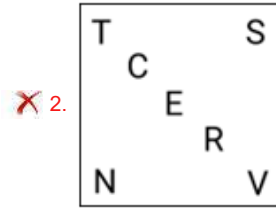
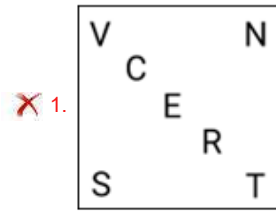
Chosen Option : 2



Q.6 Which figure should replace the question mark (?) in the following series to continue the pattern?



Ans



Question ID : 264330129631

Option 1 ID : 264330507892

Option 2 ID : 264330507891

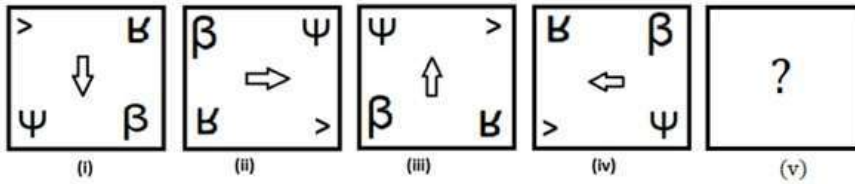
Option 3 ID : 264330507893

Option 4 ID : 264330507890

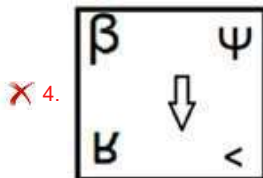
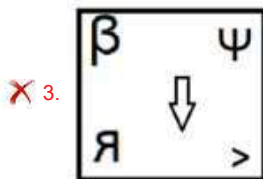
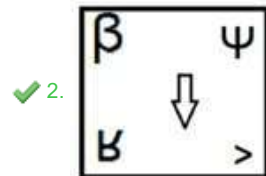
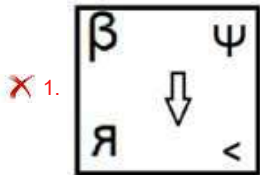
Status : Answered

Chosen Option : 4

Q.7 Select the figure from among the given options that can replace the question mark (?) in the following series.



Ans



Question ID : 264330106546

Option 1 ID : 264330418487

Option 2 ID : 264330418485

Option 3 ID : 264330418486

Option 4 ID : 264330418488

Status : Answered

Chosen Option : 2

Q.8 Select the correct combination of mathematical signs to sequentially replace the * signs and to balance the given equation.
 $20 * 96 * 66 * 11 * 10 * 56$

Ans ✓ 1. +, -, +, x, =

✗ 2. +, -, +, =, x

✗ 3. -, x, +, +, =

✗ 4. -, +, +, x, =

Question ID : 26433076556

Option 1 ID : 264330300289

Option 2 ID : 264330300288

Option 3 ID : 264330300291

Option 4 ID : 264330300290

Status : Answered

Chosen Option : 1

Q.9 D, E, F, G, H, J and K were sitting in a straight row, facing north. J was exactly between H and E. Only K was to the right of F. Only G was to the left of D. H was to the immediate left of F. Who was to the immediate right of D?

- Ans
- 1. H
 - 2. J
 - 3. F
 - 4. E

Question ID : 26433087017
 Option 1 ID : 264330341711
 Option 2 ID : 264330341709
 Option 3 ID : 264330341712
 Option 4 ID : 264330341710
 Status : Answered
 Chosen Option : 4

Q.10 Which figure should replace the question mark (?) if the following series were to be continued?

	V		E		S		V		E						
B	E	U	W	U	V	U	V	W	B	W	S	W	S	B	?
S	W		B	S		E	B		U	E		V	U		

Ans

- 1.

		U
S	B	W
E	V	
- 2.

		V
S	B	W
E	U	
- 3.

		S
U	B	E
W	V	
- 4.

		E
S	U	B
W	V	

Question ID : 264330103910
 Option 1 ID : 264330407942
 Option 2 ID : 264330407944
 Option 3 ID : 264330407941
 Option 4 ID : 264330407943
 Status : Answered
 Chosen Option : 3

Q.11 Select the set in which the numbers are related in the same way as are the numbers of the given sets.

(NOTE: Operations should be performed on the whole numbers, without breaking down the numbers into its constituent digits. E.g., 13 – Operations on 13 such as adding/ deleting/ multiplying etc. to 13 can be performed. Breaking down 13 into 1 and 3 and then performing mathematical operations on 1 and 3 is not allowed.

(428, 150, 278)
(401, 139, 262)

Ans 1. (389, 183, 206)

2. (349, 145, 206)

3. (191, 891, 118)

4. (245, 213, 122)

Question ID : 264330178752

Option 1 ID : 264330701038

Option 2 ID : 264330701036

Option 3 ID : 264330701037

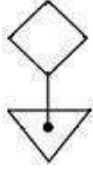
Option 4 ID : 264330701035

Status : Answered

Chosen Option : 1

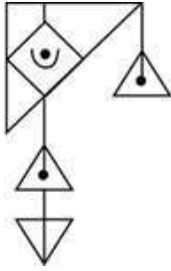


Q.12 Select the option in which the given figure is embedded (rotation is NOT allowed).

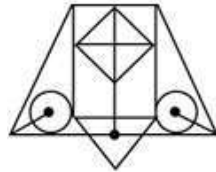


Ans

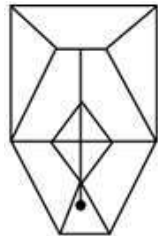
✗ 1.



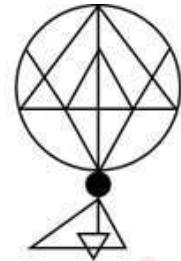
✓ 2.



✗ 3.



✗ 4.



Question ID : 264330114682

Option 1 ID : 264330450814

Option 2 ID : 264330450813

Option 3 ID : 264330450815

Option 4 ID : 264330450816

Status : Answered

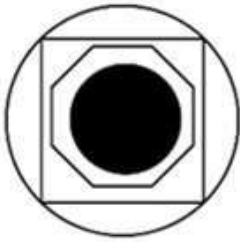
Chosen Option : 2

Q.13 Select the option figure in which the given figure is embedded as its part (rotation is NOT allowed).

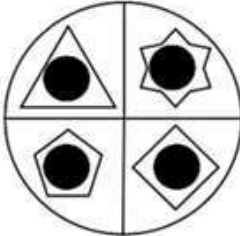


Ans

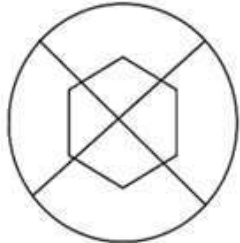
✗ 1.



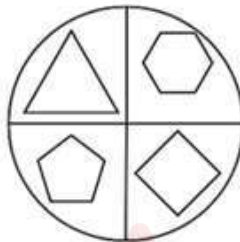
✗ 2.



✗ 3.



✓ 4.



Question ID : 264330118228

Option 1 ID : 264330464728

Option 2 ID : 264330464729

Option 3 ID : 264330464730

Option 4 ID : 264330464727

Status : Answered

Chosen Option : 4

Q.14 Six numbers, 1, 2, 3, 4, 5 and 6, are written on the different faces of a dice. Three different positions of the same dice are shown (Figures 1-3). Find the number on the face opposite to the face showing '3'.

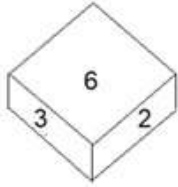


Figure 1

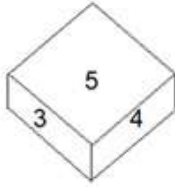


Figure 2

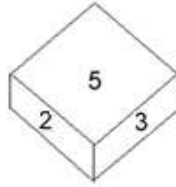


Figure 3

- Ans
- 1. 4
 - 2. 2
 - 3. 1
 - 4. 5

Question ID : 264330112583

Option 1 ID : 264330442419

Option 2 ID : 264330442420

Option 3 ID : 264330442418

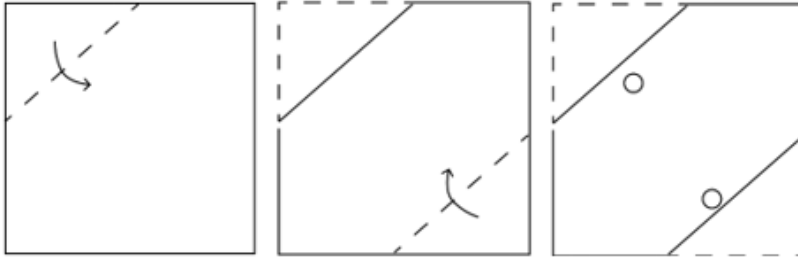
Option 4 ID : 264330442417

Status : Answered

Chosen Option : 3

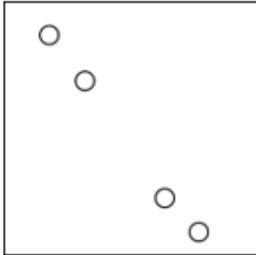


Q.15 A square sheet of paper is folded along the dotted line successively along the directions shown and is then punched in the last. How would the paper look when unfolded?

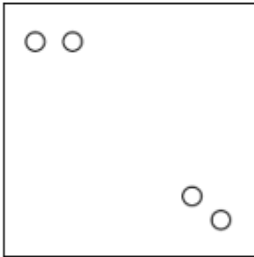


Ans

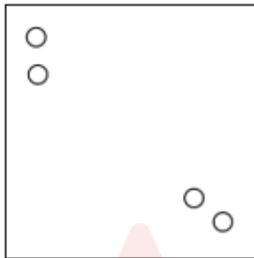
✓ 1.



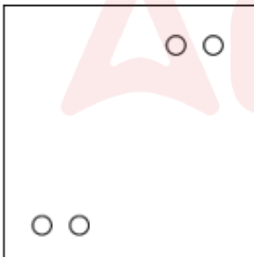
✗ 2.



✗ 3.



✗ 4.



Question ID : 264330172413

Option 1 ID : 264330676206

Option 2 ID : 264330676203

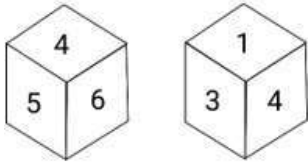
Option 3 ID : 264330676204

Option 4 ID : 264330676205

Status : Answered

Chosen Option : 1

Q.16 Six numbers 1, 2, 3, 4, 5 and 6 are written on different faces of a dice. Two positions of this dice are shown in the figure. Find the number on the face opposite to '2'.



- Ans
- 1. 5
 - 2. 4
 - 3. 6
 - 4. 3

Question ID : 26433076506
 Option 1 ID : 264330300089
 Option 2 ID : 264330300090
 Option 3 ID : 264330300091
 Option 4 ID : 264330300088
 Status : Answered
 Chosen Option : 2

Q.17 Select a figure from amongst the four given options which, when placed in the blank space of figure (X), would complete the pattern.



Ans

- 1.
- 2.
- 3.
- 4.

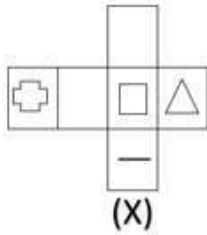
Question ID : 264330102210
 Option 1 ID : 264330401306
 Option 2 ID : 264330401307
 Option 3 ID : 264330401305
 Option 4 ID : 264330401308
 Status : Answered
 Chosen Option : 4

Q.18 Select the option that is related to the fourth term in the same way as the first term is related to the second term and the fifth term is related to the sixth term.
98 : 9 :: ? : 13 :: 458 : 21

- Ans
- 1. 168
 - 2. 158
 - 3. 185
 - 4. 186

Question ID : 26433052095
Option 1 ID : 264330203685
Option 2 ID : 264330203683
Option 3 ID : 264330203682
Option 4 ID : 264330203684
Status : Answered
Chosen Option : 4

Q.19 Choose the dice from the given options that is similar to the dice formed from the given sheet of paper (X).



Ans

- 1.
- 2.
- 3.
- 4.

Question ID : 264330111294
Option 1 ID : 264330437263
Option 2 ID : 264330437262
Option 3 ID : 264330437261
Option 4 ID : 264330437264
Status : Answered
Chosen Option : 2

Q.20 Which of the following interchanges of signs would make the given equation correct?
 $7 - 4 \times 40 \div 5 + 6 = 51$

- Ans
- 1. - and +
 - 2. + and ×
 - 3. - and ×
 - 4. + and ×

Question ID : 26433085653
Option 1 ID : 264330336314
Option 2 ID : 264330336313
Option 3 ID : 264330336315
Option 4 ID : 264330336316
Status : Answered
Chosen Option : 4

Q.21 Two statements are given followed by two conclusions numbered I and II. Assuming the statements to be true, even if they seem to be at variance from commonly known facts, decide which of the conclusions logically follow(s) from the statements.

Statements:

Some Bags are Waters.

All Waters are Liquids.

Conclusions:

I. Some Liquids are Bags.

II. All Bags are Liquids.

- Ans
- 1. Only conclusion II follows.
 - 2. Both conclusions I and II follow.
 - 3. Only conclusion I follows.
 - 4. Neither conclusion I nor II follows.

Question ID : 26433076593
Option 1 ID : 264330300437
Option 2 ID : 264330300438
Option 3 ID : 264330300436
Option 4 ID : 264330300439
Status : Answered
Chosen Option : 3

Q.22 In a certain code language, 'BELONG' is written as 'DVTLRT' and 'STUDIO' is written as 'MGKWWL'. How will 'UPDATE' be written as in that language?

- Ans
- 1. KPRBUS
 - 2. KLRZBL
 - 3. KJLDFO
 - 4. KKBZLV

Question ID : 26433082949
Option 1 ID : 264330325632
Option 2 ID : 264330325631
Option 3 ID : 264330325629
Option 4 ID : 264330325630
Status : Not Answered
Chosen Option : --

Q.23 1, 2, 3, 4, 5 and 6 are written on different faces of a dice. Three different positions of the same dice are shown below. Find the number on the face opposite to the one showing '6'.

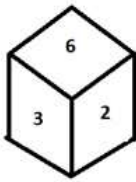


figure 1

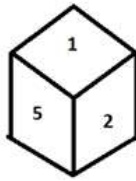


figure 2

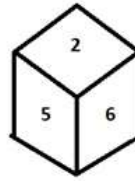


figure 3

- Ans**
- 1. 5
 - 2. 4
 - 3. 1
 - 4. 2

Question ID : 264330110550

Option 1 ID : 264330434477

Option 2 ID : 264330434479

Option 3 ID : 264330434478

Option 4 ID : 264330434480

Status : Answered

Chosen Option : 3

Q.24 Select the correct mirror image of the given figure when the mirror is placed at PQ as shown below.



- Ans**
- 1. x w 7 B K B 7 w x
 - 2. F 3 2 q k B 7 w x
 - 3. F 3 2 q k B 7 w x
 - 4. F 3 2 q k B 7 w x

Question ID : 26433080784

Option 1 ID : 264330317069

Option 2 ID : 264330317070

Option 3 ID : 264330317072

Option 4 ID : 264330317071

Status : Answered

Chosen Option : 1

Q.25 Select the correct mirror image of the given combination when the mirror is placed at MN as shown below.



Ans

- ✓ 1. z b v ɛ ɛ J
- ✗ 2. z b v ɛ ɛ J
- ✗ 3. z ɛ ɛ ɛ J
- ✗ 4. z ɛ ɛ ɛ J

Question ID : 264330117001

Option 1 ID : 264330460088

Option 2 ID : 264330460085

Option 3 ID : 264330460087

Option 4 ID : 264330460086

Status : Answered

Chosen Option : 1

Section : Numerical Ability

Q.1 The curved surface area of a right circular cone of radius 21 cm is 1518 cm^2 . What is the slant height of the cone? (Use $\pi = \frac{22}{7}$)

- Ans
- ✗ 1. 21 cm
 - ✗ 2. 25 cm
 - ✓ 3. 23 cm
 - ✗ 4. 27 cm

Question ID : 264330119371

Option 1 ID : 264330467773

Option 2 ID : 264330467774

Option 3 ID : 264330467772

Option 4 ID : 264330467771

Status : Answered

Chosen Option : 3

Q.2 An amount of ₹2,500 is divided into two parts in such a way that, if one part is put out at 5% p.a. simple interest and the other at 6% p.a., then the yearly annual interest will be ₹140. How much is lent at 5% p.a.?

- Ans
- ✗ 1. ₹500
 - ✓ 2. ₹1,000
 - ✗ 3. ₹2,000
 - ✗ 4. ₹1,500

Question ID : 264330182531

Option 1 ID : 264330715915

Option 2 ID : 264330715916

Option 3 ID : 264330715918

Option 4 ID : 264330715917

Status : Answered

Chosen Option : 2

Q.3 A man invests ₹5,000 for 3 years at compound interest. After one year, the money amounts to ₹5,450. What will be the amount (to the nearest rupee) due at the end of 3 years?

- Ans 1. ₹6,475
 2. ₹5,575
 3. ₹7,405
 4. ₹6,970

Question ID : 264330104360

Option 1 ID : 264330409743

Option 2 ID : 264330409744

Option 3 ID : 264330409741

Option 4 ID : 264330409742

Status : Answered

Chosen Option : 1

Q.4 A shopkeeper offers a scheme on the purchase of shirts: 'Buy two, get one free of the same kind'. The cost price of one shirt is ₹300. What should be the selling price (in ₹) of one shirt if he wants to earn 30% profit?

- Ans 1. 585
 2. 535
 3. 485
 4. 435

Question ID : 264330183843

Option 1 ID : 264330721048

Option 2 ID : 264330721049

Option 3 ID : 264330721050

Option 4 ID : 264330721051

Status : Answered

Chosen Option : 1

Q.5 The average of the marks of Ram, Ramesh, Somesh and Soham in mathematics is 75, and the average of the marks of Ramesh, Somesh, Soham and Mohan in mathematics is 80. The marks scored by Mohan alone in mathematics is 70. Find the marks scored by Ram alone in mathematics.

- Ans 1. 50
 2. 78
 3. 62
 4. 45

Question ID : 264330130065

Option 1 ID : 264330509492

Option 2 ID : 264330509494

Option 3 ID : 264330509493

Option 4 ID : 264330509491

Status : Answered

Chosen Option : 1

Q.6 12 फुट लम्बे वर्गाकार बोर्ड की एक भुजा से 4 फुट लम्बाई का एक टुकड़ा काटा जाता है। बोर्ड के क्षेत्रफल में कितने प्रतिशत की कमी होती है?

- Ans
- 1. 30.33%
 - 2. 13.33%
 - 3. 27.27%
 - 4. 33.33%

Question ID : 264330131347
Option 1 ID : 264330514500
Option 2 ID : 264330514501
Option 3 ID : 264330514499
Option 4 ID : 264330514502
Status : Answered
Chosen Option : 4

Q.7 The number of prime numbers which are greater than 100 and less than 150 is:

- Ans
- 1. 8
 - 2. 11
 - 3. 10
 - 4. 9

Question ID : 264330104482
Option 1 ID : 264330410232
Option 2 ID : 264330410231
Option 3 ID : 264330410230
Option 4 ID : 264330410229
Status : Answered
Chosen Option : 3

Q.8 Raju lost 13% by selling a radio set for ₹4,524. What percentage of profit would he have earned by selling it for ₹6,400 (rounded off to two decimal places)?

- Ans
- 1. 25.25%
 - 2. 28.52%
 - 3. 21.05%
 - 4. 23.08%

Question ID : 264330131517
Option 1 ID : 264330515172
Option 2 ID : 264330515171
Option 3 ID : 264330515174
Option 4 ID : 264330515173
Status : Answered
Chosen Option : 3

Q.9 If the diameter of a circle is increased by 24%, then the percentage increase in the area is:

- Ans
- 1. 50.46%
 - 2. 53.76%
 - 3. 48.28%
 - 4. 64.34%

Question ID : 264330103696
Option 1 ID : 264330407092
Option 2 ID : 264330407090
Option 3 ID : 264330407089
Option 4 ID : 264330407091
Status : Answered
Chosen Option : 2

Q.10 The diameter of a solid cylinder is 28 cm and its height is 20 cm Find the total surface area (in cm^2) of the cylinder. (Use $\pi = \frac{22}{7}$)

- Ans
- 1. 2992
 - 2. 2991
 - 3. 2990
 - 4. 2993

Question ID : 264330109545
Option 1 ID : 264330430459
Option 2 ID : 264330430458
Option 3 ID : 264330430457
Option 4 ID : 264330430460
Status : Answered
Chosen Option : 1

Q.11 In a circular race on a track of length 2000 m, X and Y start from the same point at the same time in opposite direction at the speeds of 15 km/h and 33 km/h, respectively. After how much time will they meet next?

- Ans
- 1. 400 sec
 - 2. 250 sec
 - 3. 300 sec
 - 4. 275 sec

Question ID : 264330183826
Option 1 ID : 264330720980
Option 2 ID : 264330720981
Option 3 ID : 264330720982
Option 4 ID : 264330720983
Status : Answered
Chosen Option : 1

Q.12 The sum of three prime numbers is 72. If one of them exceeds another by 24, then one of the numbers is:

- Ans 1. 47
 2. 29
 3. 37
 4. 31

Question ID : 264330109530
Option 1 ID : 264330430400
Option 2 ID : 264330430397
Option 3 ID : 264330430399
Option 4 ID : 264330430398
Status : Answered
Chosen Option : 1

Q.13 The value of $\frac{(11.12)^2 - (8.12)^2}{(0.3)^2 + (0.3)(18.94)}$ is:

- Ans 1. 10
 2. 100
 3. 1
 4. 0.1

Question ID : 264330103653
Option 1 ID : 264330406918
Option 2 ID : 264330406917
Option 3 ID : 264330406920
Option 4 ID : 264330406919
Status : Answered
Chosen Option : 1

Q.14 Dileep and Rajesh can complete a work separately in 20 days and 30 days, respectively. In how many days will the entire work be completed, if they work on an alternate basis, starting with Rajesh?

- Ans 1. 28
 2. 22
 3. 12
 4. 24

Question ID : 264330103996
Option 1 ID : 264330408288
Option 2 ID : 264330408286
Option 3 ID : 264330408285
Option 4 ID : 264330408287
Status : Answered
Chosen Option : 3

Q.15 If $\frac{1}{a} : \frac{1}{b} : \frac{1}{c} = 2 : 3 : 5$, then $a : b : c$ is equal to:

- Ans
- 1. 2 : 4 : 5
 - 2. 6 : 10 : 15
 - 3. 15 : 10 : 6
 - 4. 15 : 10 : 12

Question ID : 264330106075
Option 1 ID : 264330416604
Option 2 ID : 264330416601
Option 3 ID : 264330416602
Option 4 ID : 264330416603
Status : Answered
Chosen Option : 3

Section : Computer Proficiency

Q.1 Which of the following statements is INCORRECT related to sorting emails in Gmail?

- Ans
- 1. Sorting mail can help us remove unwanted emails from your inbox and more easily unsubscribe from mailings we don't need.
 - 2. Depending on what we use your email address for, sorting emails can also help you keep track of trends and correspondence by looking at messages sorted by specific criteria.
 - 3. We can sort emails by a variety of factors, like the topic, sender, size, or age of the message.
 - 4. Sorting mail cannot help us remove unwanted emails from our inboxes and more easily unsubscribe from mailings we don't need.

Question ID : 264330178244
Option 1 ID : 264330699033
Option 2 ID : 264330699032
Option 3 ID : 264330699031
Option 4 ID : 264330699034
Status : Answered
Chosen Option : 4

Q.2 _____ involves using a smartphone's data connection to provide internet access to other devices such as laptops or tablets.

- Ans
- 1. Satellite
 - 2. Dial up
 - 3. Wi-Fi
 - 4. Tethering

Question ID : 264330180803
Option 1 ID : 264330709176
Option 2 ID : 264330709177
Option 3 ID : 264330709175
Option 4 ID : 264330709178
Status : Answered
Chosen Option : 4

Q.3 What does the 'Paste' command do in Microsoft Word 365?

- Ans
- 1. Deletes the content of the clipboard
 - 2. Inserts the content from the clipboard into the document
 - 3. Removes the selected text
 - 4. Copies the selected text to the clipboard

Question ID : 264330180737
Option 1 ID : 264330708918
Option 2 ID : 264330708917
Option 3 ID : 264330708915
Option 4 ID : 264330708916
Status : Answered
Chosen Option : 2

Q.4 Which Microsoft Excel 365 function calculates the average of a range of numbers?

- Ans
- 1. AVG
 - 2. MEDIAN
 - 3. AVERAGE
 - 4. MEAN

Question ID : 264330180689
Option 1 ID : 264330708723
Option 2 ID : 264330708724
Option 3 ID : 264330708726
Option 4 ID : 264330708725
Status : Answered
Chosen Option : 1

Q.5 Which option in MS-Word 365 allows you to align the text in a paragraph to both the left and right margins, creating a visually appealing document?

- Ans
- 1. Line Spacing
 - 2. Justification
 - 3. Paragraph Alignment
 - 4. Text Indentation

Question ID : 264330173334
Option 1 ID : 264330679817
Option 2 ID : 264330679818
Option 3 ID : 264330679816
Option 4 ID : 264330679815
Status : Answered
Chosen Option : 2

Q.6 Which option allows you to select multiple documents while opening them in Microsoft Word 365?

- Ans
- 1. Hold down the Tab key while clicking on the documents.
 - 2. Hold down the Windows key while clicking on the documents.
 - 3. Hold down the Shift key while clicking on the documents.
 - 4. Hold down the Alt key while clicking on the documents.

Question ID : 264330177673
Option 1 ID : 264330696809
Option 2 ID : 264330696810
Option 3 ID : 264330696807
Option 4 ID : 264330696808
Status : Answered
Chosen Option : 3

Q.7 In Microsoft Word 365, which option is used to save an existing document with a new name or in a different location?

- Ans 1. Save As
 2. Save
 3. Copy
 4. Print

Question ID : 264330180727
Option 1 ID : 264330708876
Option 2 ID : 264330708875
Option 3 ID : 264330708878
Option 4 ID : 264330708877
Status : Answered
Chosen Option : 1

Q.8 Which of the following shortcut keys is used to modify selected text as Italic in MS-Word 365?

- Ans 1. Ctrl + I
 2. Ctrl + U
 3. Ctrl + O
 4. Ctrl + B

Question ID : 264330178268
Option 1 ID : 264330699129
Option 2 ID : 264330699128
Option 3 ID : 264330699130
Option 4 ID : 264330699127
Status : Answered
Chosen Option : 1

Q.9 In MS Excel 365 which file type used in MS Excel produces a comma-delimited text file that can be read by almost all spreadsheet applications on any operating system?

- Ans 1. csv
 2. docx
 3. pdf
 4. xlsx

Question ID : 264330182121
Option 1 ID : 264330714325
Option 2 ID : 264330714323
Option 3 ID : 264330714326
Option 4 ID : 264330714324
Status : Answered
Chosen Option : 4

Q.10 Suppose you have a worksheet in MS Excel 365 containing sales data for different months. You need to update the sales figure for May, as there was an error in the initial entry. What steps should you follow to edit the sales data for the month of May?

- Ans**
- 1. Click on the cell containing the May sales data -> Press F6 to enter edit mode -> Make the necessary changes -> Press Enter to confirm the edit
 - 2. Click on the cell containing the May sales data -> Press F2 to enter edit mode -> Make the necessary changes -> Press Enter to confirm the edit
 - 3. Click on the cell containing the May sales data -> Press F7 to enter edit mode -> Make the necessary changes -> Press Enter to confirm the edit
 - 4. Click on the cell containing the May sales data -> Press F1 to enter edit mode -> Make the necessary changes -> Press Enter to confirm the edit

Question ID : **264330180828**

Option 1 ID : **264330709277**

Option 2 ID : **264330709276**

Option 3 ID : **264330709278**

Option 4 ID : **264330709275**

Status : **Answered**

Chosen Option : **3**



Constable Executive Male and Female in Delhi Police Examination 2023

Roll Number	
Candidate Name	
Venue Name	Pawan Ganga Educational Centre 1
Exam Date	17/11/2023
Exam Time	12:00 PM - 1:30 PM
Subject	Constable Executive Male and Female in Delhi Police Examination 2023

Section : **General Knowledge**

Q.1 Which of the following festivals is celebrated primarily by the Parsi Community?

- Ans
- 1. Songkran
 - 2. Milad-un-Nabi
 - 3. Deepawali
 - 4. Jashan-e-Mihragan

Question ID : 264330109623

Option 1 ID : 264330430771

Option 2 ID : 264330430769

Option 3 ID : 264330430772

Option 4 ID : 264330430770

Status : **Not Attempted and Marked For Review**

Chosen Option : --

Q.2 Which of the following was NOT an effect of devaluation of the rupee in 1991 to make an international adjustment of Indian currency?

- Ans
- 1. Increased imports
 - 2. Increased exports
 - 3. Raised the influx of foreign capital
 - 4. Decreased imports

Question ID : 264330118253

Option 1 ID : 264330464829

Option 2 ID : 264330464827

Option 3 ID : 264330464830

Option 4 ID : 264330464828

Status : **Answered**

Chosen Option : 4

Q.3 How many writs are guaranteed under Article 32 of the Indian Constitution?

- Ans
- 1. Six
 - 2. Five
 - 3. Four
 - 4. Seven

Question ID : 264330134570

Option 1 ID : 264330527237

Option 2 ID : 264330527236

Option 3 ID : 264330527235

Option 4 ID : 264330527238

Status : **Answered**

Chosen Option : 2

Q.4 Who was the author of the book titled 'Poverty and Un-British Rule in India'?

- Ans 1. Sardar Vallabhbhai Patel
 2. Dadabhai Naoroji
 3. Mahatma Gandhi
 4. Subhash Chandra Bose

Question ID : 264330123748
Option 1 ID : 264330485029
Option 2 ID : 264330485030
Option 3 ID : 264330485027
Option 4 ID : 264330485028
Status : Answered
Chosen Option : 2

Q.5 Vijayalaya, who belonged to the ancient chiefly family of the Cholas from Uraiyur, captured the delta from the Muttaraiyar in the middle of the 9th century and built the town of _____.

- Ans 1. Kanchipuram
 2. Thanjavur
 3. Vengi
 4. Darasuram

Question ID : 264330166883
Option 1 ID : 264330654569
Option 2 ID : 264330654567
Option 3 ID : 264330654570
Option 4 ID : 264330654568
Status : Not Attempted and Marked For Review
Chosen Option : --

Q.6 Totaram Sharma, Pandit Ayodhya Prasad, Gopal Das and Babu Ram Shanker Pagaldas are noted players of which of the following instruments?

- Ans 1. Sarod
 2. Pakhawaj
 3. Mridangam
 4. Sarangi

Question ID : 264330144042
Option 1 ID : 264330564431
Option 2 ID : 264330564434
Option 3 ID : 264330564433
Option 4 ID : 264330564432
Status : Marked For Review
Chosen Option : 4

Q.7 In Ancient India, which of the following dynasties was empowered in Deccan by Gautamiputra Satakarni?

- Ans 1. Saka
 2. Satavahana
 3. Pahlava
 4. Kushana

Question ID : 264330182698
Option 1 ID : 264330716566
Option 2 ID : 264330716565
Option 3 ID : 264330716563
Option 4 ID : 264330716564
Status : Answered
Chosen Option : 2

Q.8 In which year was the Basketball Federation of India established?

- Ans 1. 1920
 2. 1950
 3. 1947
 4. 1951

Question ID : 264330176099
Option 1 ID : 264330690694
Option 2 ID : 264330690693
Option 3 ID : 264330690692
Option 4 ID : 264330690691
Status : Not Attempted and Marked For Review
Chosen Option : --

Q.9 Who among the following Gurus of Sikh religion was the last Guru?

- Ans 1. Guru Angad
 2. Guru Amar Das
 3. Guru Hargobind
 4. Guru Gobind Singh

Question ID : 264330120259
Option 1 ID : 264330471294
Option 2 ID : 264330471292
Option 3 ID : 264330471291
Option 4 ID : 264330471293
Status : Marked For Review
Chosen Option : 4

Q.10 Who among the following was not among the convicts sentenced to death by the British Government of India in the Lahore conspiracy case?

- Ans
- 1. Sukhdev Thapar
 - 2. Shivaram Rajguru
 - 3. Bhagat Singh
 - 4. Udham Singh

Question ID : 264330120265

Option 1 ID : 264330471316

Option 2 ID : 264330471318

Option 3 ID : 264330471317

Option 4 ID : 264330471315

Status : **Not Attempted and Marked For Review**

Chosen Option : --

Q.11 The decennial census of India is conducted under which Census Act?

- Ans
- 1. Census Act 2001
 - 2. Census Act 1955
 - 3. Census Act 1948
 - 4. Census Act 2010

Question ID : 264330179263

Option 1 ID : 264330703057

Option 2 ID : 264330703056

Option 3 ID : 264330703055

Option 4 ID : 264330703058

Status : **Not Attempted and Marked For Review**

Chosen Option : --

Q.12 According to Census of India 2011, which union territories have the lowest literacy rate?

- Ans
- 1. Chandigarh
 - 2. Lakshadweep
 - 3. Andaman and Nicobar
 - 4. Dadra and Nagar Haveli

Question ID : 264330132751

Option 1 ID : 264330520101

Option 2 ID : 264330520102

Option 3 ID : 264330520100

Option 4 ID : 264330520099

Status : **Answered**

Chosen Option : 4

Q.13 In Indo Islamic construction, _____ and lime mortar was an important factor in construction.

- Ans
- 1. stone
 - 2. mud
 - 3. wood
 - 4. concrete

Question ID : 264330106237
Option 1 ID : 264330417251
Option 2 ID : 264330417250
Option 3 ID : 264330417249
Option 4 ID : 264330417252
Status : Answered
Chosen Option : 1

Q.14 As of November 2022, in which of the following periods in Indian history was the Republic Day parade NOT performed at the Rajpath(now called Kartavya Path)?

- Ans
- 1. 2006-2008
 - 2. 2000-2004
 - 3. 1950-1954
 - 4. 1990-1994

Question ID : 264330119959
Option 1 ID : 264330470113
Option 2 ID : 264330470112
Option 3 ID : 264330470111
Option 4 ID : 264330470114
Status : Not Answered
Chosen Option : --

Q.15 It was decided to celebrate the Republic day on 26th January every year by the Constitution makers to pay homage to the 'Purna Swaraj' declaration which was promulgated on _____.

- Ans
- 1. 26th January 1932
 - 2. 26th January 1931
 - 3. 26th January 1929
 - 4. 26th January 1930

Question ID : 264330113365
Option 1 ID : 264330445547
Option 2 ID : 264330445546
Option 3 ID : 264330445548
Option 4 ID : 264330445545
Status : Answered
Chosen Option : 4

Q.16 तालाब पारिस्थितिकी तंत्र का सबसे गहरा, वनस्पति-रहित और दलदली क्षेत्र क्या कहलाता है?

- Ans
- 1. उष्णकटिबंधीय क्षेत्र (The tropical zone)
 - 2. समशीतोष्ण क्षेत्र (The temperate zone)
 - 3. लॉटिक क्षेत्र (The lotic zone)
 - 4. गहन क्षेत्र (The profundal zone)

Question ID : 264330169099

Option 1 ID : 264330663202

Option 2 ID : 264330663200

Option 3 ID : 264330663201

Option 4 ID : 264330663199

Status : **Not Attempted and Marked For Review**

Chosen Option : --

Q.17 In the year 2021-22, which country was the largest importer of Jute from India?

- Ans
- 1. USA
 - 2. France
 - 3. Italy
 - 4. Japan

Question ID : 264330180508

Option 1 ID : 264330708000

Option 2 ID : 264330708002

Option 3 ID : 264330708001

Option 4 ID : 264330707999

Status : **Not Answered**

Chosen Option : --

Q.18 _____ is the largest employer of labour force in India.

- Ans
- 1. Financial Services Sector
 - 2. Cottage Industries
 - 3. Agriculture
 - 4. Small Scale Industries

Question ID : 264330109107

Option 1 ID : 264330428707

Option 2 ID : 264330428708

Option 3 ID : 264330428705

Option 4 ID : 264330428706

Status : **Answered**

Chosen Option : 3

Q.19 Who popularised the movement of Theosophical Society in India?

- Ans
- 1. Keshav Chandra Sen
 - 2. Ramkrishna Bhandarkar
 - 3. Annie Besant
 - 4. Swami Vivekananda

Question ID : 264330120309

Option 1 ID : 264330471489

Option 2 ID : 264330471488

Option 3 ID : 264330471487

Option 4 ID : 264330471490

Status : **Marked For Review**

Chosen Option : 1

Q.20 Which of the following Peninsular rivers flows westward?

- Ans 1. Krishna
 2. Kaveri
 3. Narmada
 4. Godavari

Question ID : 264330176011
Option 1 ID : 264330690342
Option 2 ID : 264330690340
Option 3 ID : 264330690341
Option 4 ID : 264330690339
Status : Answered
Chosen Option : 3

Q.21 निम्नलिखित में से कौन-सा आज्ञापत्र किसी लोकसेवक को उसके आधिकारिक कर्तव्यों को ठीक से करने या शक्ति का दुरुपयोग न करने का आदेश देने के लिए न्यायालय द्वारा जारी किया जाता है?

- Ans 1. परमादेश (Mandamus)
 2. बन्दी प्रत्यक्षीकरण (Habeas corpus)
 3. निषेधाज्ञा (Prohibition)
 4. अधिकार पृच्छा (Quo-warranto)

Question ID : 264330110131
Option 1 ID : 264330432802
Option 2 ID : 264330432804
Option 3 ID : 264330432803
Option 4 ID : 264330432801
Status : Answered
Chosen Option : 4

Q.22 As per Census 2011, which Indian demographic group typically exhibits a higher literacy rate?

- Ans 1. Urban females
 2. Urban males
 3. Rural males
 4. Rural females

Question ID : 264330183038
Option 1 ID : 264330717886
Option 2 ID : 264330717884
Option 3 ID : 264330717885
Option 4 ID : 264330717887
Status : Answered
Chosen Option : 2

Q.23 Which method is used to separate ribosomes from the cell?

- Ans 1. Chromatography
 2. Distillation
 3. Filtration
 4. Ultracentrifugation

Question ID : 264330113331
Option 1 ID : 264330445410
Option 2 ID : 264330445412
Option 3 ID : 264330445409
Option 4 ID : 264330445411
Status : Not Attempted and Marked For Review
Chosen Option : --

Q.24 Which of the following is the most dominant flora of the plant kingdom?

- Ans
- 1. Bryophyta
 - 2. Angiosperm
 - 3. Gymnosperm
 - 4. Pteridophyte

Question ID : 264330120906
Option 1 ID : 264330473842
Option 2 ID : 264330473839
Option 3 ID : 264330473840
Option 4 ID : 264330473841
Status : Marked For Review
Chosen Option : 4

Q.25 Who among the following is the first ever recipient of Rajiv Gandhi Khel Ratna Award?

- Ans
- 1. Vishwanathan Anand
 - 2. Dhyan Chand
 - 3. Virat Kohli
 - 4. Sunil Chhetri

Question ID : 264330176741
Option 1 ID : 264330693180
Option 2 ID : 264330693182
Option 3 ID : 264330693181
Option 4 ID : 264330693179
Status : Not Answered
Chosen Option : --

Q.26 A new phase of which initiative of the Government of India was launched in 2022 with the overall vision of creating 'Garbage Free Cities' and with the new component of wastewater treatment including faecal sludge management?

- Ans
- 1. Wastewater Management Framework in India
 - 2. Rural Open Defecation Free Initiative
 - 3. Swachh Bharat Mission (Urban) 2.0
 - 4. Swachh Bharat Mission (Urban) 3.0

Question ID : 264330117584
Option 1 ID : 264330462361
Option 2 ID : 264330462362
Option 3 ID : 264330462363
Option 4 ID : 264330462364
Status : Not Attempted and Marked For Review
Chosen Option : --

Q.27 Which of the following causes the Tsunami waves?

- Ans
- 1. Exterior of the earth
 - 2. Interior of the earth
 - 3. Interior of the moon
 - 4. Exterior of the moon

Question ID : 264330120020
Option 1 ID : 264330470335
Option 2 ID : 264330470336
Option 3 ID : 264330470338
Option 4 ID : 264330470337
Status : Answered
Chosen Option : 2

Q.28 Which of the following is NOT a component of fiscal reforms?

- Ans 1. Change in interest rate
 2. Public expenditure reforms
 3. Taxation reforms
 4. Control of public debt

Question ID : 264330110180
Option 1 ID : 264330432999
Option 2 ID : 264330432998
Option 3 ID : 264330432997
Option 4 ID : 264330433000
Status : Answered
Chosen Option : 4

Q.29 In the year 2017, which of the following countries hosted the Under-17 Football World Cup?

- Ans 1. United Arab Emirates
 2. India
 3. United States of America
 4. Thailand

Question ID : 264330118467
Option 1 ID : 264330465270
Option 2 ID : 264330465269
Option 3 ID : 264330465271
Option 4 ID : 264330465272
Status : Not Attempted and Marked For Review
Chosen Option : --

Q.30 When did India win its last gold medal in Hockey in the Olympics?

- Ans 1. 1972
 2. 1976
 3. 1968
 4. 1980

Question ID : 264330176749
Option 1 ID : 264330693213
Option 2 ID : 264330693214
Option 3 ID : 264330693212
Option 4 ID : 264330693211
Status : Not Answered
Chosen Option : --

Q.31 The Chairman of the State Public Service Commission can be removed by:

- Ans 1. The President of India
 2. The Prime Minister of India
 3. The Governor of the State
 4. The Chief Minister of the State

Question ID : 264330177747
Option 1 ID : 264330697096
Option 2 ID : 264330697097
Option 3 ID : 264330697095
Option 4 ID : 264330697098
Status : Answered
Chosen Option : 3

Q.32 Where are the Ellora caves located?

- Ans 1. Fatehpur Sikri
 2. Aurangabad
 3. Indore
 4. Delhi

Question ID : 264330109320
Option 1 ID : 264330429557
Option 2 ID : 264330429559
Option 3 ID : 264330429560
Option 4 ID : 264330429558
Status : Answered
Chosen Option : 2

Q.33 Set in the holy city of Varanasi, 'Kashi Ka Assi' is written by:

- Ans 1. Kamleshwar
 2. Kedar Nath Singh
 3. Amrita Pritam
 4. Kashi Nath Singh

Question ID : 26433064626
Option 1 ID : 264330253096
Option 2 ID : 264330253098
Option 3 ID : 264330253099
Option 4 ID : 264330253097
Status : Not Answered
Chosen Option : --

Q.34 Which of the following percussion instruments is used in the popular folk dance 'Lavani'?

- Ans 1. Dholak
 2. Xylophone
 3. Piano
 4. Sleigh Bells

Question ID : 264330106189
Option 1 ID : 264330417059
Option 2 ID : 264330417057
Option 3 ID : 264330417058
Option 4 ID : 264330417060
Status : Not Attempted and Marked For Review
Chosen Option : --

Q.35 To file the nomination for the post of Vice President, the candidate must be proposed by at least _____ electors.

- Ans 1. 25
 2. 30
 3. 40
 4. 20

Question ID : 264330137419
Option 1 ID : 264330538306
Option 2 ID : 264330538304
Option 3 ID : 264330538303
Option 4 ID : 264330538305
Status : Not Answered
Chosen Option : --

Q.36 The Index of Industrial Production (IIP) is an index that shows the growth rates in different industry groups of the economy in a fixed period of time. What is the base year of IIP?

- Ans
- 1. 2010-11
 - 2. 2012-13
 - 3. 2011-12
 - 4. 2004-05

Question ID : 264330130664
Option 1 ID : 264330511769
Option 2 ID : 264330511768
Option 3 ID : 264330511770
Option 4 ID : 264330511767
Status : Answered
Chosen Option : 3

Q.37 A baking student started baking a cake. After some time he realised his cake was not rising and hard. This is because he forgotten to add the following ingredient:

- Ans
- 1. milk
 - 2. more cake flour
 - 3. baking powder
 - 4. vanilla extract

Question ID : 264330182813
Option 1 ID : 264330717025
Option 2 ID : 264330717024
Option 3 ID : 264330717023
Option 4 ID : 264330717026
Status : Answered
Chosen Option : 3

Q.38 Which region is the source of basaltic magma?

- Ans
- 1. Transition region
 - 2. Lower mantle
 - 3. The core
 - 4. Upper mantle

Question ID : 264330120083
Option 1 ID : 264330470587
Option 2 ID : 264330470589
Option 3 ID : 264330470590
Option 4 ID : 264330470588
Status : Not Answered
Chosen Option : --

Q.39 Who among the following wrote, 'The Autobiography of an Unknown Indian'?

- Ans
- 1. Swami Rama
 - 2. Nirad C Chaudhuri
 - 3. Prakash Tandon
 - 4. BR Ambedkar

Question ID : 26433071669
Option 1 ID : 264330281103
Option 2 ID : 264330281100
Option 3 ID : 264330281102
Option 4 ID : 264330281101
Status : Not Answered
Chosen Option : --

Q.40 Which of the following parts of the Indian Constitution deals with the Directive Principles of State Policy?

- Ans
- 1. Part XX
 - 2. Part IV
 - 3. Part XI
 - 4. Part XIV

Question ID : 264330113397
Option 1 ID : 264330445674
Option 2 ID : 264330445675
Option 3 ID : 264330445676
Option 4 ID : 264330445673
Status : Answered
Chosen Option : 2

Q.41 The Rajas(kings) did not have capital cities, palaces or regular armies, nor did they collect taxes during the _____ period.

- Ans
- 1. Rigvedic
 - 2. Huna
 - 3. Shunga
 - 4. Mauryan

Question ID : 264330182874
Option 1 ID : 264330717241
Option 2 ID : 264330717242
Option 3 ID : 264330717243
Option 4 ID : 264330717240
Status : Answered
Chosen Option : 1

Q.42 Famous dance personality Rajarshi Bhagya Chandra is also known as:

- Ans
- 1. Rewa Prasad Dwivedi
 - 2. Bharat Muni
 - 3. Bhasa
 - 4. Ningthou Ching-Thang Khomba

Question ID : 264330109304
Option 1 ID : 264330429493
Option 2 ID : 264330429494
Option 3 ID : 264330429496
Option 4 ID : 264330429495
Status : Not Answered
Chosen Option : --

Q.43 Which foreign power made the Indian pepper trade a royal monopoly?

- Ans
- 1. The Portuguese
 - 2. The French
 - 3. The Dutch
 - 4. The Spanish

Question ID : 264330120145
Option 1 ID : 264330470837
Option 2 ID : 264330470836
Option 3 ID : 264330470835
Option 4 ID : 264330470838
Status : Answered
Chosen Option : 1

Q.44 Part XIX of the Indian Constitution deals with:

- Ans
- 1. elections
 - 2. miscellaneous
 - 3. emergency provisions
 - 4. amendment of the Constitution

Question ID : 264330111506
Option 1 ID : 264330438111
Option 2 ID : 264330438109
Option 3 ID : 264330438110
Option 4 ID : 264330438112
Status : Marked For Review
Chosen Option : 2

Q.45 Who among the following received, in 1997, the Japan Art Association's Praemium Imperiale prize for music?

- Ans
- 1. Pandit Ravi Shankar
 - 2. Ustad Allarakha Khan
 - 3. Pandit Shiv Kumar Sharma
 - 4. Ustad Bismillah Khan

Question ID : 264330114168
Option 1 ID : 264330448758
Option 2 ID : 264330448760
Option 3 ID : 264330448759
Option 4 ID : 264330448757
Status : Not Answered
Chosen Option : --

Q.46 Which of the following is INCORRECT with respect to repo rate?

- Ans
- 1. It is a single policy rate to signal the stance of monetary policy to achieve macro-economic objectives of growth with price stability.
 - 2. It is a policy rate which is the key lending rate of the central bank, and its nomenclature varies from country to country.
 - 3. It is the rate at which banks place their funds with the RBI and receive collateral.
 - 4. It is the rate at which the commercial banks borrow funds from the RBI.

Question ID : 264330112463
Option 1 ID : 264330441938
Option 2 ID : 264330441939
Option 3 ID : 264330441940
Option 4 ID : 264330441937
Status : Answered
Chosen Option : 3

Q.47 Alarmel Valli and Rukmini Devi Arundale are associated with which of the following styles of Indian Dances?

- Ans
- 1. Kathakali
 - 2. Bharatanatyam
 - 3. Kathak
 - 4. Kuchipudi

Question ID : 264330130512
Option 1 ID : 264330511160
Option 2 ID : 264330511162
Option 3 ID : 264330511161
Option 4 ID : 264330511159
Status : Answered
Chosen Option : 2

Q.48 Select the personality who received the Sangeet Natak Akademi 2021 award for his/her contribution in Kuchipudi.

- Ans
- 1. N Sailaja
 - 2. Kalamandalam Girija
 - 3. Bhuvan Kumar
 - 4. Bijay Kumar Jena

Question ID : 264330130527
Option 1 ID : 264330511221
Option 2 ID : 264330511220
Option 3 ID : 264330511219
Option 4 ID : 264330511222
Status : Marked For Review
Chosen Option : 2

Q.49 Correctly match the following Indian season with their crops:

Season	Crop
1. Kharif	a. Fodder
2. Rabi	b. Wheat
3. Zaid	c. Rice

- Ans
- 1. 1-c, 2- a, 3-b
 - 2. 1-a, 2- b, 3-c
 - 3. 1-b, 2- c, 3-a
 - 4. 1-c, 2- b, 3-a

Question ID : 264330119882
Option 1 ID : 264330469803
Option 2 ID : 264330469806
Option 3 ID : 264330469804
Option 4 ID : 264330469805
Status : Answered
Chosen Option : 2

Q.50 Net national product at market price can be defined as:

- Ans
- 1. Gross national product at market price plus depreciation
 - 2. Net domestic product at market price plus net income from abroad
 - 3. Net domestic product at market price minus net income from abroad
 - 4. Net domestic product at market price minus depreciation

Question ID : 264330120881
Option 1 ID : 264330473739
Option 2 ID : 264330473742
Option 3 ID : 264330473740
Option 4 ID : 264330473741
Status : Answered
Chosen Option : 1

Section : Reasoning

Q.1 Which two signs should be interchanged to make the following equation correct?

$$99 \div 8 + 2 - 16 \times 4 = 39$$

- Ans
- 1. \times and $+$
 - 2. $+$ and $+$
 - 3. $-$ and \times
 - 4. $+$ and $-$

Question ID : 264330101081
Option 1 ID : 264330396870
Option 2 ID : 264330396869
Option 3 ID : 264330396871
Option 4 ID : 264330396872
Status : Answered
Chosen Option : 2

Q.2 Six students, Ram, Gopi, Sita, Vimal, Tony and John, are sitting in a straight row facing north. Only two people sit to the left of Sita. Only two people sit between Sita and Vimal. Ram sits to the immediate right of Tony. Gopi sits to the immediate left of John. John is not a neighbour of Vimal. Who sits second from the extreme left end of the row?

- Ans
- 1. John
 - 2. Vimal
 - 3. Tony
 - 4. Ram

Question ID : 26433089503
Option 1 ID : 264330351516
Option 2 ID : 264330351515
Option 3 ID : 264330351513
Option 4 ID : 264330351514
Status : Not Attempted and Marked For Review
Chosen Option : --

Q.3 Select the option that is related to the fourth term in the same way as the first term is related to the second term and the fifth term is related to the sixth term.
 70 : 625 :: ? : 144 :: 37 : 196

- Ans 1. 35
 2. 31
 3. 41
 4. 45

Question ID : 26433059945
 Option 1 ID : 264330234615
 Option 2 ID : 264330234614
 Option 3 ID : 264330234612
 Option 4 ID : 264330234613
 Status : Not Attempted and Marked For Review
 Chosen Option : --

Q.4 Which figure should replace the question mark (?) in the following series to continue the pattern?

7	P	8	S	
X 8 A	8 A ♡	A ♡ P	♡ P Y	?
♡	X	Y	A	

Ans

1.

♡
P Y S
6
2.

P
Y S ♡
6
3.

Y
S ♡ P
6
4.

A
P Y ♡
S

Question ID : 264330129630
 Option 1 ID : 264330507888
 Option 2 ID : 264330507889
 Option 3 ID : 264330507887
 Option 4 ID : 264330507886
 Status : Answered
 Chosen Option : 1

Q.5 Which figure should replace the question mark (?) if the following series were to be continued?

B	2	6	2	6	4	♡	8	Y	8	Y	S	6	2	T	
	4			8			S			2			4		?
8	♡	S	♡	S	Y	2	6	4	6	4	T	8	Y	S	

Ans

✗ 1.

S	6	2
	T	
4	8	Y

✓ 2.

2	T	4
	8	
Y	S	9

✗ 3.

9	6	2
	T	
4	8	Y

✗ 4.

2	T	4
	8	
Y	S	6

Question ID : 264330103865

Option 1 ID : 264330407764

Option 2 ID : 264330407763

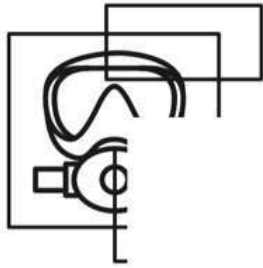
Option 3 ID : 264330407762

Option 4 ID : 264330407761

Status : Not Attempted and Marked For Review

Chosen Option : --

Q.6 Which of the following option figures will complete the pattern in the figure given below?



Ans

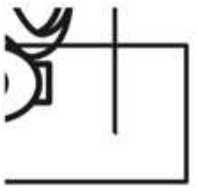
1.



2.



3.



4.



Question ID : 26433080624

Option 1 ID : 264330316431

Option 2 ID : 264330316430

Option 3 ID : 264330316432

Option 4 ID : 264330316429

Status : Answered

Chosen Option : 4

Q.7 In a certain code language, 'EXIT' is written as 'FJYU' and 'HIDE' is written as 'IEJF'. How will 'GAME' be written in that language?

Ans 1. FBND

2. HBNF

3. HNBF

4. FNBD

Question ID : 26433087179

Option 1 ID : 264330342354

Option 2 ID : 264330342353

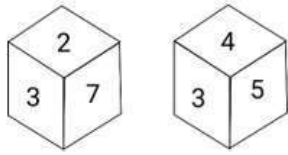
Option 3 ID : 264330342355

Option 4 ID : 264330342356

Status : Answered

Chosen Option : 3

Q.8 Six numbers 1, 2, 3, 4, 5 and 7 are written on different faces of a dice. Two positions of this dice are shown in the figure. If both the even numbers are written on opposite faces of the dice, find the number on the face opposite to '1'.



- Ans**
- 1. 5
 - 2. 7
 - 3. 2
 - 4. 3

Question ID : 264330101268

Option 1 ID : 264330397618

Option 2 ID : 264330397617

Option 3 ID : 264330397620

Option 4 ID : 264330397619

Status : Answered

Chosen Option : 4

Q.9 Select the number from among the given options that can replace the question mark (?) in the following series.
4, 10, 17, 25, ?, 44

- Ans**
- 1. 32
 - 2. 34
 - 3. 33
 - 4. 31

Question ID : 264330111623

Option 1 ID : 264330438578

Option 2 ID : 264330438577

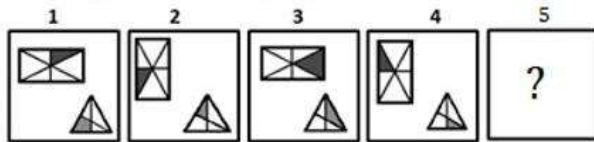
Option 3 ID : 264330438579

Option 4 ID : 264330438580

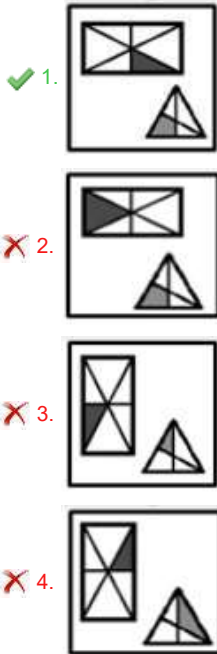
Status : Answered

Chosen Option : 2

Q.10 Each of the following questions consists of 4 figures marked 1, 2, 3 and 4 called the Problem Figures followed by 4 other figures. Select a figure from amongst the Answer Figures which will continue the same series as established by the four Problem Figures.



Ans



Question ID : 264330110539

Option 1 ID : 264330434436

Option 2 ID : 264330434434

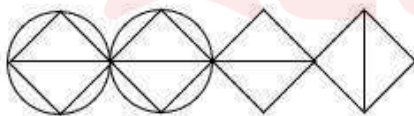
Option 3 ID : 264330434433

Option 4 ID : 264330434435

Status : Answered

Chosen Option : 1

Q.11 How many triangles are there in the given figure?



- Ans**
- 1. 6
 - 2. 7
 - 3. 8
 - 4. 9

Question ID : 26433068630

Option 1 ID : 264330269035

Option 2 ID : 264330269034

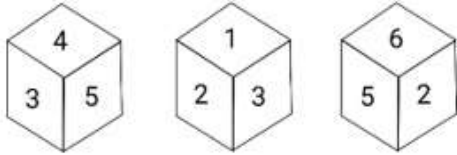
Option 3 ID : 264330269032

Option 4 ID : 264330269033

Status : Answered

Chosen Option : 3

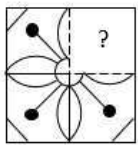
Q.12 A cube (dice) has six different numbers drawn over its six faces. Three different positions of this cube are shown in the given figure. Which number is on the face opposite to '1'?



- Ans
- 1. 4
 - 2. 6
 - 3. 2
 - 4. 5

Question ID : 264330113149
 Option 1 ID : 264330444681
 Option 2 ID : 264330444682
 Option 3 ID : 264330444683
 Option 4 ID : 264330444684
 Status : Answered
 Chosen Option : 4

Q.13 Select the option figure that will replace the question mark (?) in the figure given below to complete the pattern.



- Ans
- 1.
 - 2.
 - 3.
 - 4.

Question ID : 26433080834
 Option 1 ID : 264330317271
 Option 2 ID : 264330317269
 Option 3 ID : 264330317272
 Option 4 ID : 264330317270
 Status : Answered
 Chosen Option : 2

Q.14 Select the set in which the numbers are related in the same way as are the numbers of the following sets.

(NOTE : Operations should be performed on the whole numbers, without breaking down the numbers into its constituent digits. E.g. 13 – Operations on 13 such as adding /deleting /multiplying etc. to 13 can be performed. Breaking down 13 into 1 and 3 and then performing mathematical operations on 1 and 3 is NOT allowed)
(4, 39), (5, 100)

- Ans 1. (6, 192)
 2. (3, 2)
 3. (9, 684)
 4. (12, 153)

Question ID : 26433052042

Option 1 ID : 264330203471

Option 2 ID : 264330203470

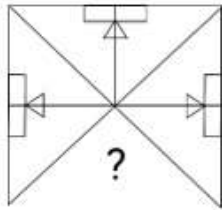
Option 3 ID : 264330203473

Option 4 ID : 264330203472

Status : **Not Attempted and Marked For Review**

Chosen Option : --

Q.15 Select the figure from the given options that will replace the question mark (?) in the figure given below to complete the pattern.

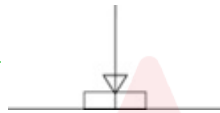


Ans

1.



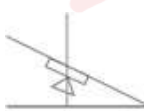
2.



3.



4.



Question ID : 264330116609

Option 1 ID : 264330458522

Option 2 ID : 264330458523

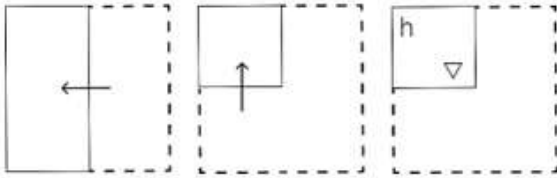
Option 3 ID : 264330458524

Option 4 ID : 264330458521

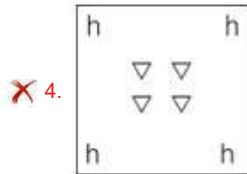
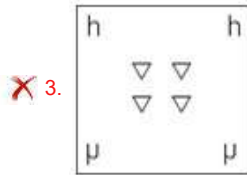
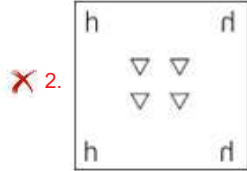
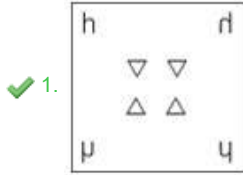
Status : **Answered**

Chosen Option : 2

Q.16 A paper is folded and cut as shown below. How will it appear when unfolded?



Ans



Question ID : 264330114713

Option 1 ID : 264330450937

Option 2 ID : 264330450938

Option 3 ID : 264330450939

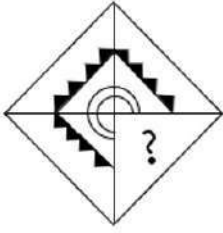
Option 4 ID : 264330450940

Status : Answered

Chosen Option : 1

Adda247

Q.17 Select the option figure that will replace the question mark (?) in the figure given below to complete the pattern.

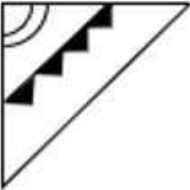


Ans

✗ 1.



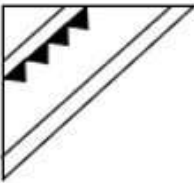
✓ 2.



✗ 3.



✗ 4.

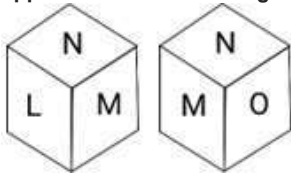


Question ID : 26433085567
Option 1 ID : 264330335971
Option 2 ID : 264330335972
Option 3 ID : 264330335969
Option 4 ID : 264330335970

Status : Answered

Chosen Option : 2

Q.18 Six letters L, M, N, O, P and Q are written on different faces of a dice. Two different positions of this dice are shown in the figure. Select the letter that will be on the face opposite to the one having O.



- Ans
- 1. Q
 - 2. N
 - 3. P
 - 4. L

Question ID : 264330121791
Option 1 ID : 264330477336
Option 2 ID : 264330477335
Option 3 ID : 264330477337
Option 4 ID : 264330477338
Status : Answered
Chosen Option : 4

Q.19 Select the combination of letters that when sequentially placed in the blanks of the given series will complete the series.

TP BD T R QT RB Q PRB T BDQ

- Ans
- 1. PBPRDTRQDPBR
 - 2. RQPBDPDTDQPR
 - 3. PBPTRQRDDPBR
 - 4. RQPBRDPBDTR

Question ID : 26433097292
Option 1 ID : 264330381867
Option 2 ID : 264330381866
Option 3 ID : 264330381868
Option 4 ID : 264330381865
Status : Answered
Chosen Option : 2

Q.20 Select the option that is related to the fifth letter-cluster in the same way as the second letter-cluster is related to the first letter-cluster and the fourth letter-cluster is related to the third letter-cluster.

GIVE : JLYH :: TAKE : WDNH :: COPY : ?

- Ans
- 1. FRRC
 - 2. FRSB
 - 3. FRSC
 - 4. ERSB

Question ID : 26433076463
Option 1 ID : 264330299917
Option 2 ID : 264330299919
Option 3 ID : 264330299918
Option 4 ID : 264330299916
Status : Answered
Chosen Option : 2

Q.21 Select the correct combination of mathematical signs to sequentially replace the * signs and to balance the given equation.
 $16 * 4 * 20 * 82 * 14 * 148$

- Ans
- 1. $\times + + - =$
 - 2. $+ + \times - =$
 - 3. $+ \times + = -$
 - 4. $\div \times + - =$

Question ID : 26433085725

Option 1 ID : 264330336603

Option 2 ID : 264330336601

Option 3 ID : 264330336604

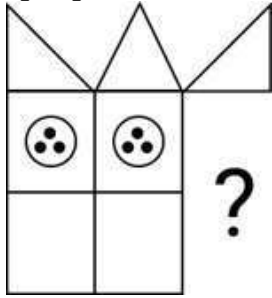
Option 4 ID : 264330336602

Status : Answered

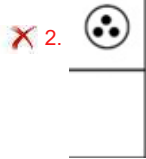
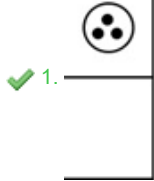
Chosen Option : 4



Q.22 Select the figure from the given options that will replace the question mark (?) in the figure given below and complete the pattern.



Ans



Question ID : 264330111710

Option 1 ID : 264330438925

Option 2 ID : 264330438927

Option 3 ID : 264330438926

Option 4 ID : 264330438928

Status : Answered

Chosen Option : 1

Q.23 Select the correct mirror image of the given combination when the mirror is placed at 'PQ' as shown below.

CZLSD7 | P
Q

Ans

- 1. 7DSLSZC
- 2. CZLSD7
- 3. 7DSLSZC
- 4. CZLSD7

Question ID : 264330129814

Option 1 ID : 264330508487

Option 2 ID : 264330508490

Option 3 ID : 264330508488

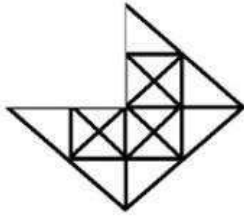
Option 4 ID : 264330508489

Status : Answered

Chosen Option : 3



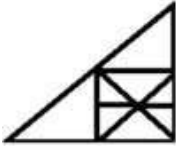
Q.24 Select a figure from amongst the four given options which, when placed in the blank space of figure (X), would complete the pattern.



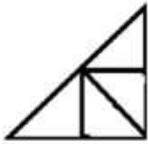
X

Ans

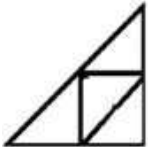
1.



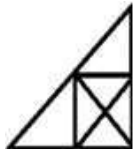
2.



3.



4.



Question ID : 264330102217

Option 1 ID : 264330401336

Option 2 ID : 264330401333

Option 3 ID : 264330401334

Option 4 ID : 264330401335

Status : Answered

Chosen Option : 4

Q.25 Read the given statements and conclusions carefully. Assuming that the information given in the statements is true, even if it appears to be at variance with commonly known facts, decide which of the given conclusions logically follow(s) from the statements.

Statements:

All pens are laptops.

All laptops are computers.

Conclusions:

I. All pens are computers.

II. All laptops are pens.

Ans 1. Only conclusion I follows

2. Only conclusion II follows

3. Neither conclusion I nor II follows

4. Both conclusions I and II follow

Question ID : 26433068287

Option 1 ID : 264330267660

Option 2 ID : 264330267661

Option 3 ID : 264330267663

Option 4 ID : 264330267662

Status : Answered

Chosen Option : 1

Q.1 The ratio of the age of a father to that of his son is 7 : 4. If the product of their ages (in years) is 1008, then what is the ratio of the age of the father to that of the son after 10 years?

Ans 1. 26 : 17

2. 17 : 13

3. 11 : 13

4. 23 : 21

Question ID : 264330118128

Option 1 ID : 264330464330

Option 2 ID : 264330464328

Option 3 ID : 264330464327

Option 4 ID : 264330464329

Status : Answered

Chosen Option : 1

Q.2 Which of the following fractions is the smallest?

$\frac{17}{21}$, $\frac{9}{11}$, $\frac{16}{19}$, $\frac{13}{15}$

Ans 1. $\frac{17}{21}$

2. $\frac{16}{19}$

3. $\frac{9}{11}$

4. $\frac{13}{15}$

Question ID : 264330106484

Option 1 ID : 264330418238

Option 2 ID : 264330418239

Option 3 ID : 264330418237

Option 4 ID : 264330418240

Status : Answered

Chosen Option : 1

Q.3 If the simple interest for 8 years is equal to 40% of the principal, then after how many years will it be equal to the principal?

Ans 1. 20

2. 15

3. 18

4. 25

Question ID : 264330119343

Option 1 ID : 264330467660

Option 2 ID : 264330467659

Option 3 ID : 264330467661

Option 4 ID : 264330467662

Status : Not Attempted and Marked For Review

Chosen Option : --

Q.4 The average of four numbers is 20, and one of these four numbers is 26. What is the average of the remaining three numbers?

- Ans
- 1. 18
 - 2. 16
 - 3. 19
 - 4. 17

Question ID : 264330131120

Option 1 ID : 264330513593

Option 2 ID : 264330513591

Option 3 ID : 264330513594

Option 4 ID : 264330513592

Status : Answered

Chosen Option : 1

Q.5 A temple top is a hollow hemispherical dome with an inner radius of 2 units and an outer radius of 3 units. How much concrete (in cubic units) is used to make the top of the temple?

- Ans
- 1. $\frac{17\pi}{3}$
 - 2. $\frac{38\pi}{3}$
 - 3. $\frac{19\pi}{3}$
 - 4. $\frac{19\pi}{6}$

Question ID : 264330112119

Option 1 ID : 264330440564

Option 2 ID : 264330440562

Option 3 ID : 264330440561

Option 4 ID : 264330440563

Status : Answered

Chosen Option : 2

Q.6 After successive discounts of 15% and 20%, an article was sold for ₹680. What is the marked price of the article?

- Ans
- 1. ₹3,000
 - 2. ₹1,000
 - 3. ₹2,000
 - 4. ₹1,500

Question ID : 264330119334

Option 1 ID : 264330467625

Option 2 ID : 264330467624

Option 3 ID : 264330467623

Option 4 ID : 264330467626

Status : Answered

Chosen Option : 2

Q.7 A camp has provisions for 60 pupils for 18 days. In how many days will the same provisions finish off if the strength of the camp is increased to 72 pupils?

- Ans
- 1. 18 days
 - 2. 15 days
 - 3. 12 days
 - 4. 8 days

Question ID : 264330182575
Option 1 ID : 264330716094
Option 2 ID : 264330716093
Option 3 ID : 264330716092
Option 4 ID : 264330716091
Status : Answered
Chosen Option : 2

Q.8 The compound interest on a certain sum of money at 8% per annum for 3 years is ₹4,058. Find the simple interest on the same sum for 4 years at 10% p.a.

- Ans
- 1. ₹6,520
 - 2. ₹6,052
 - 3. ₹6,250
 - 4. ₹6,025

Question ID : 264330104314
Option 1 ID : 264330409557
Option 2 ID : 264330409559
Option 3 ID : 264330409558
Option 4 ID : 264330409560
Status : Answered
Chosen Option : 3

Q.9 The selling price of an item is 15% more than the cost price and shopkeeper is able to earn ₹25. What is the selling price of the item?

- Ans
- 1. ₹166.67
 - 2. ₹177.67
 - 3. ₹191.67
 - 4. ₹181.67

Question ID : 264330112073
Option 1 ID : 264330440379
Option 2 ID : 264330440377
Option 3 ID : 264330440380
Option 4 ID : 264330440378
Status : Answered
Chosen Option : 3

Q.10

Calculate the HCF of $\frac{1.75}{9}$, $\frac{5.6}{12}$ and $\frac{7}{18}$.

Ans

1. $\frac{11}{180}$

2. $\frac{7}{180}$

3. $\frac{13}{180}$

4. $\frac{17}{180}$

Question ID : 264330118501

Option 1 ID : 264330465407

Option 2 ID : 264330465408

Option 3 ID : 264330465406

Option 4 ID : 264330465405

Status : Answered

Chosen Option : 2

Q.11 A hemisphere of lead of radius 8 cm is recast into a right circular cone of height 64 cm. Find the radius of the base of the cone. (Where $\pi = \frac{22}{7}$)

Ans

1. $4\sqrt{2}$ cm

2. 4 cm

3. $2\sqrt{2}$ cm

4. 8 cm

Question ID : 264330118141

Option 1 ID : 264330464381

Option 2 ID : 264330464379

Option 3 ID : 264330464380

Option 4 ID : 264330464382

Status : Answered

Chosen Option : 2

Q.12 What will be the HCF of $(2 \times 2 \times 3 \times 3 \times 5 \times 7 \times 7 \times 11)$, $(2 \times 3 \times 3 \times 5 \times 11)$, $(2 \times 3 \times 3 \times 5 \times 7 \times 11 \times 11)$, $(2 \times 3 \times 3 \times 5 \times 5 \times 11)$, $(2 \times 3 \times 5 \times 7 \times 7)$?

Ans

1. 66

2. 42

3. 30

4. 105

Question ID : 264330104331

Option 1 ID : 264330409627

Option 2 ID : 264330409626

Option 3 ID : 264330409625

Option 4 ID : 264330409628

Status : Answered

Chosen Option : 3

Q.13 It takes eight hours for a 600 km journey, if 120 km is done by train and the rest by car. It takes 20 minutes more, if 200 km is done by train and the rest by car. The ratio of the speed of the train to that of the cars is

- Ans
- 1. 2 : 3
 - 2. 1 : 3
 - 3. 3 : 4
 - 4. 1 : 2

Question ID : 264330106663

Option 1 ID : 264330418955

Option 2 ID : 264330418953

Option 3 ID : 264330418956

Option 4 ID : 264330418954

Status : Not Attempted and Marked For Review

Chosen Option : --

Q.14 Kiran sells an object to Varun at a profit of 10%. Varun sells that object to Arun for ₹1,155 and makes a profit of 5%. At what cost did Kiran purchase the object?

- Ans
- 1. ₹1,000
 - 2. ₹1,500
 - 3. ₹2,500
 - 4. ₹2,000

Question ID : 264330103710

Option 1 ID : 264330407145

Option 2 ID : 264330407146

Option 3 ID : 264330407148

Option 4 ID : 264330407147

Status : Answered

Chosen Option : 1

Q.15 The price of a commodity increased by 22%. By what percentage (correct to two decimal places) should its consumption be reduced so that the total expenditure remains the same?

- Ans
- 1. 19.89%
 - 2. 20.03%
 - 3. 21.22%
 - 4. 18.03%

Question ID : 264330118049

Option 1 ID : 264330464013

Option 2 ID : 264330464011

Option 3 ID : 264330464012

Option 4 ID : 264330464014

Status : Not Answered

Chosen Option : --

Q.1 In MS Word 365 If you want to print pages 1, 3, and 5 of a document, which of the following page ranges should you select?

- Ans
- 1. 1-3, 5
 - 2. 1-5
 - 3. 1, 3, 5
 - 4. 1, 3-5

Question ID : 264330173591
Option 1 ID : 264330680845
Option 2 ID : 264330680843
Option 3 ID : 264330680844
Option 4 ID : 264330680846
Status : Answered
Chosen Option : 3

Q.2 Which of the following is used to move text from one location to another in a word document of MS-Word 365?

- Ans
- 1. Copy and paste the text at desired location
 - 2. Copy the selected text
 - 3. Select and cut the selected text
 - 4. Cut and paste the text at desired location

Question ID : 264330178266
Option 1 ID : 264330699119
Option 2 ID : 264330699121
Option 3 ID : 264330699122
Option 4 ID : 264330699120
Status : Answered
Chosen Option : 1

Q.3 In MS Excel 365 which of the following keyboard shortcuts in MS Excel will allow us to open a new spreadsheet?

- Ans
- 1. Shift + N
 - 2. Ctrl + N
 - 3. Alt + O
 - 4. Ctrl + O

Question ID : 264330180813
Option 1 ID : 264330709218
Option 2 ID : 264330709216
Option 3 ID : 264330709217
Option 4 ID : 264330709215
Status : Answered
Chosen Option : 2

Q.4 In MS Excel 365, to insert a new row above the selected row in Microsoft Excel 365, which command should you use?

- Ans
- 1. Insert Column
 - 2. Insert Row
 - 3. Delete Row
 - 4. Delete Column

Question ID : 264330182117
Option 1 ID : 264330714308
Option 2 ID : 264330714307
Option 3 ID : 264330714309
Option 4 ID : 264330714310
Status : Answered
Chosen Option : 2

Q.5 How do you print a Microsoft Word 365 document?

- Ans
- 1. Select the Print command and then select 'Ok'
 - 2. Select the Ready Printer command and then select 'Ok'
 - 3. Select the Print command
 - 4. Select the Ready Printer command

Question ID : 264330182761
Option 1 ID : 264330716815
Option 2 ID : 264330716817
Option 3 ID : 264330716816
Option 4 ID : 264330716818
Status : Answered
Chosen Option : 1

Q.6 एमएस एक्सेल 365 (MS Excel 365) में, निम्नलिखित में से कौन-सा विकल्प माइक्रोसॉफ्ट एक्सेल (Microsoft Excel) में टेबल बनाने का एक लाभ नहीं है?

- Ans
- 1. बढ़ी हुई डेटा अखंडता और सटीकता
 - 2. ऑटोमेटिक फिल्टरिंग और सॉर्टिंग विकल्प
 - 3. बेहतर कैलकुलेशन क्षमता
 - 4. उन्नत विसुअल अपील और फॉर्मेटिंग

Question ID : 264330178081
Option 1 ID : 264330698389
Option 2 ID : 264330698387
Option 3 ID : 264330698390
Option 4 ID : 264330698388
Status : Not Answered
Chosen Option : --

Q.7 Which of the following is the correct structure of an email address?

- Ans
- 1. name_domain.com
 - 2. name@com_domain
 - 3. name@domain.com
 - 4. name.com

Question ID : 264330180790
Option 1 ID : 264330709124
Option 2 ID : 264330709125
Option 3 ID : 264330709123
Option 4 ID : 264330709126
Status : Answered
Chosen Option : 3

Q.8 Which of the following is the correct option to convert text into superscript?

- Ans 1. Shift+S
 2. Ctrl+Shift+ +
 3. Ctrl+Shift+U
 4. Ctrl+Shift+S

Question ID : 264330180710
Option 1 ID : 264330708809
Option 2 ID : 264330708807
Option 3 ID : 264330708810
Option 4 ID : 264330708808
Status : Answered
Chosen Option : 2

Q.9 Which of the following statements related to MS Word 365 is/are correct?

- 1) 'Save' allows you to update a previously saved file with new content.
2) 'Save As' allows you to save a new file or an existing file to a new place with the same name or a different name.

- Ans 1. Neither (1) nor (2)
 2. Only (1)
 3. Both (1) and (2)
 4. Only (2)

Question ID : 264330180638
Option 1 ID : 264330708522
Option 2 ID : 264330708519
Option 3 ID : 264330708521
Option 4 ID : 264330708520
Status : Answered
Chosen Option : 4

Q.10 A global network of interconnected computers and devices is called _____.

- Ans 1. Manet
 2. Ethernet
 3. Intranet
 4. Internet

Question ID : 264330177649
Option 1 ID : 264330696713
Option 2 ID : 264330696711
Option 3 ID : 264330696714
Option 4 ID : 264330696712
Status : Answered
Chosen Option : 4

Constable Executive Male and Female in Delhi Police Examination 2023

Roll Number	
Candidate Name	
Venue Name	OCBT IT services
Exam Date	17/11/2023
Exam Time	3:00 PM - 4:30 PM
Subject	Constable Executive Male and Female in Delhi Police Examination 2023

Section : General Knowledge

Q.1 Which country did India beat in the Thomas Cup Finals in 2022?

- Ans 1. Indonesia
 2. Malaysia
 3. Pakistan
 4. Singapore

Question ID : 264330113740
Option 1 ID : 264330447047
Option 2 ID : 264330447045
Option 3 ID : 264330447048
Option 4 ID : 264330447046
Status : Answered
Chosen Option : 1

Q.2 Who among the following is a famous performer of Kalbelia dance form?

- Ans 1. Minati Mishra
 2. Geeta Mahalik
 3. Gulabo Sapera
 4. Vyjayanti Kashi

Question ID : 264330141361
Option 1 ID : 264330553780
Option 2 ID : 264330553781
Option 3 ID : 264330553779
Option 4 ID : 264330553782
Status : Answered
Chosen Option : 3

Q.3 नलवाड़ी मेला किस भारतीय राज्य में आयोजित किया जाता है?

- Ans 1. पंजाब
 2. उत्तर प्रदेश
 3. हिमाचल प्रदेश
 4. हरियाणा

Question ID : 264330132418
Option 1 ID : 264330518768
Option 2 ID : 264330518770
Option 3 ID : 264330518767
Option 4 ID : 264330518769
Status : Answered
Chosen Option : 2

Q.4 Which of the following is an example of a Western coast port?

- Ans 1. Vishakhapatnam port
 2. Kandla port
 3. Haldia port
 4. Tuticorin port

Question ID : 264330173603
Option 1 ID : 264330680891
Option 2 ID : 264330680894
Option 3 ID : 264330680892
Option 4 ID : 264330680893
Status : Answered
Chosen Option : 2

Q.5 रथ सप्तमी का सांस्कृतिक उत्सव मुख्य रूप से भारत के किस राज्य में मनाया जाता है?

- Ans 1. पश्चिम बंगाल
 2. बिहार
 3. हिमाचल प्रदेश
 4. आंध्र प्रदेश

Question ID : 264330109611
Option 1 ID : 264330430722
Option 2 ID : 264330430721
Option 3 ID : 264330430724
Option 4 ID : 264330430723
Status : Answered
Chosen Option : 1

Q.6 Who has the power to grant pardons?

- Ans 1. Chief Justice of India
 2. Attorney General
 3. Chief Minister
 4. President

Question ID : 264330169051
Option 1 ID : 264330663010
Option 2 ID : 264330663009
Option 3 ID : 264330663007
Option 4 ID : 264330663008
Status : Answered
Chosen Option : 4

Q.7 The aim of 'Poorna Swaraj' was adopted during the 1929 session of the _____ Congress.

- Ans 1. Lucknow
 2. Poona
 3. Amritsar
 4. Lahore

Question ID : 264330118992
Option 1 ID : 264330466624
Option 2 ID : 264330466623
Option 3 ID : 264330466626
Option 4 ID : 264330466625
Status : Answered
Chosen Option : 4

Q.8 Which of the following Articles mentions that the state shall not deny to any person equality before the law or the equal protection of the laws within the territory of India?

- Ans
- 1. Article 12
 - 2. Article 13
 - 3. Article 15
 - 4. Article 14

Question ID : 264330180042
Option 1 ID : 264330706151
Option 2 ID : 264330706152
Option 3 ID : 264330706154
Option 4 ID : 264330706153
Status : Answered
Chosen Option : 4

Q.9 नादिर शाह _____ का शासक था जिसने 1739 में दिल्ली शहर पर विजय प्राप्त करके इसे लूट लिया था।

- Ans
- 1. ईरान
 - 2. इराक
 - 3. तुर्की
 - 4. मंगोलिया

Question ID : 264330114089
Option 1 ID : 264330448444
Option 2 ID : 264330448441
Option 3 ID : 264330448442
Option 4 ID : 264330448443
Status : Answered
Chosen Option : 1

Q.10 Nanjiyamma received the National Award _____ for the song Kalakkatha Sandana from the Malayalam film Ayyappanum Koshiyum.

- Ans
- 1. 2019
 - 2. 2018
 - 3. 2020
 - 4. 2021

Question ID : 264330114171
Option 1 ID : 264330448769
Option 2 ID : 264330448772
Option 3 ID : 264330448770
Option 4 ID : 264330448771
Status : Answered
Chosen Option : 1

Q.11 State legislature has the concurrent powers enumerated in List _____ of the Seventh Schedule of the Constitution of India.

- Ans
- 1. I
 - 2. IV
 - 3. II
 - 4. III

Question ID : 26433086864
Option 1 ID : 264330341097
Option 2 ID : 264330341100
Option 3 ID : 264330341098
Option 4 ID : 264330341099
Status : Answered
Chosen Option : 4

Q.12 Who among the following social reformers of British India was known as Lokhitwadi?

- Ans
- 1. VeeresalingamPantulu
 - 2. Gopal Hari Deshmukh
 - 3. Narayan Guru
 - 4. Jyotiba Phule

Question ID : 264330182742
Option 1 ID : 264330716742
Option 2 ID : 264330716741
Option 3 ID : 264330716740
Option 4 ID : 264330716739
Status : Answered
Chosen Option : 2

Q.13 Sonal Mansingh got the Sangeet Natak Akademi Award for which form of dance?

- Ans
- 1. Manipuri
 - 2. Kuchipudi
 - 3. Mohiniattam
 - 4. Odissi

Question ID : 26433074871
Option 1 ID : 264330293574
Option 2 ID : 264330293572
Option 3 ID : 264330293573
Option 4 ID : 264330293575
Status : Answered
Chosen Option : 4

Q.14 Who among the following established the Arya Samaj and in which year?

- Ans
- 1. Swami Dayananda Sarasvati in 1875
 - 2. Swami Vivekananda in 1785
 - 3. Swami Vivekananda in 1875
 - 4. Swami Dayananda Sarasvati in 1785

Question ID : 264330118997
Option 1 ID : 264330466643
Option 2 ID : 264330466646
Option 3 ID : 264330466644
Option 4 ID : 264330466645
Status : Answered
Chosen Option : 1

Q.15 How many fundamental duties were enumerated in the 42nd Amendment of the Constitution?

- Ans 1. 10
 2. 8
 3. 12
 4. 18

Question ID : 264330116389
Option 1 ID : 264330457642
Option 2 ID : 264330457641
Option 3 ID : 264330457643
Option 4 ID : 264330457644
Status : Answered
Chosen Option : 1

Q.16 Which natural form of vitamin B helps to prevent some of the major birth defects of the baby's brain (anencephaly) and spina bifida?

- Ans 1. Pyridoxine
 2. Cobalamin
 3. Pantothenic acid
 4. Folate

Question ID : 264330130987
Option 1 ID : 264330513062
Option 2 ID : 264330513059
Option 3 ID : 264330513061
Option 4 ID : 264330513060
Status : Answered
Chosen Option : 3

Q.17 Which is the largest brackish water lagoon in Asia that was designated as a 'Ramsar Site' in 1981?

- Ans 1. Loktak lake
 2. Chilika lake
 3. Tampara lake
 4. Harike lake

Question ID : 264330141745
Option 1 ID : 264330555301
Option 2 ID : 264330555302
Option 3 ID : 264330555300
Option 4 ID : 264330555299
Status : Answered
Chosen Option : 2

Q.18 Which of the following Trophies/Cups is related to cricket?

- Ans 1. Thomas Cup
 2. Santosh Trophy
 3. Durand Cup
 4. Duleep Trophy

Question ID : 264330132554
Option 1 ID : 264330519313
Option 2 ID : 264330519312
Option 3 ID : 264330519314
Option 4 ID : 264330519311
Status : Answered
Chosen Option : 4

Q.19 In which of the following states was the first edition of the Khelo India University Games held in 2020?

- Ans
- 1. Odisha
 - 2. Assam
 - 3. Haryana
 - 4. Karnataka

Question ID : 264330118458
Option 1 ID : 264330465234
Option 2 ID : 264330465235
Option 3 ID : 264330465233
Option 4 ID : 264330465236
Status : Answered
Chosen Option : 1

Q.20 Who became the first Indian woman to win an Olympic medal?

- Ans
- 1. Sakshi Malik
 - 2. Mary Kom
 - 3. Saina Nehwal
 - 4. Karnam Malleswari

Question ID : 264330119258
Option 1 ID : 264330467322
Option 2 ID : 264330467319
Option 3 ID : 264330467321
Option 4 ID : 264330467320
Status : Answered
Chosen Option : 4

Q.21 Vacuoles in plant cells can occupy up to what percentage of the cell's volume?

- Ans
- 1. 20
 - 2. 60
 - 3. 90
 - 4. 40

Question ID : 264330131729
Option 1 ID : 264330516018
Option 2 ID : 264330516016
Option 3 ID : 264330516015
Option 4 ID : 264330516017
Status : Answered
Chosen Option : 2

Q.22 Which of the following replaced the Planning Commission in 2014?

- Ans
- 1. NABARD
 - 2. NITI Aayog
 - 3. SEBI
 - 4. Stand Up India Scheme

Question ID : 264330110169
Option 1 ID : 264330432955
Option 2 ID : 264330432954
Option 3 ID : 264330432953
Option 4 ID : 264330432956
Status : Answered
Chosen Option : 2

Q.23 The following are the features of which initiative of the Government of India?

- a. It is devised to transform India into a global design and manufacturing hub.
b. It has an Investor Facilitation Cell to assist investors in seeking regulatory approvals, hand-holding services through the pre-investment phase, execution and after-care support.
c. It aspires to facilitate investment, foster innovation, enhance skill development and build best-in-class manufacturing infrastructure.

- Ans 1. Start-up India
 2. Stand up India
 3. Skill India
 4. Make in India

Question ID : 264330112498

Option 1 ID : 264330442079

Option 2 ID : 264330442077

Option 3 ID : 264330442080

Option 4 ID : 264330442078

Status : Answered

Chosen Option : 1

Q.24 उस मौर्य राजा का नाम बताइए जिसने अफगानिस्तान और बलूचिस्तान के रूप में उत्तर पश्चिम तक नियंत्रण बढ़ाया।

- Ans 1. सम्रति
 2. चंद्रगुप्त मौर्य
 3. दशरथ
 4. बिन्दुसार

Question ID : 264330119470

Option 1 ID : 264330468163

Option 2 ID : 264330468164

Option 3 ID : 264330468166

Option 4 ID : 264330468165

Status : Answered

Chosen Option : 2

Q.25 Which river basin has a catchment area of 5,179 km², which originates from the Belgaum district of Karnataka and falls in Karwar Bay?

- Ans 1. Brahmani
 2. Kalinadi
 3. Bharathapuzha
 4. Palar

Question ID : 264330113533

Option 1 ID : 264330446219

Option 2 ID : 264330446218

Option 3 ID : 264330446217

Option 4 ID : 264330446220

Status : Answered

Chosen Option : 3

Q.26 How many layers of structures consist of the cell envelope?

- Ans 1. One
 2. Four
 3. Three
 4. Two

Question ID : 264330113329
Option 1 ID : 264330445401
Option 2 ID : 264330445404
Option 3 ID : 264330445403
Option 4 ID : 264330445402
Status : Answered
Chosen Option : 4

Q.27 विशेष रूप से 1988 में ऑपरेशन कैक्टस के बाद भारत ने किस देश को व्यापक सुरक्षा सहयोग की पेशकश की थी?

- Ans 1. भूटान
 2. मालदीव
 3. नेपाल
 4. श्रीलंका

Question ID : 264330130606
Option 1 ID : 264330511535
Option 2 ID : 264330511537
Option 3 ID : 264330511538
Option 4 ID : 264330511536
Status : Answered
Chosen Option : 4

Q.28 Which of the following is NOT listed in the Directive Principles of State Policy?

- Ans 1. Equal pay for equal work
 2. Promote the welfare of the people
 3. Uniform civil code for citizens
 4. Rights for transgenders in certain cases

Question ID : 264330130780
Option 1 ID : 264330512232
Option 2 ID : 264330512231
Option 3 ID : 264330512234
Option 4 ID : 264330512233
Status : Answered
Chosen Option : 4

Q.29 Pandit Ram Dayal Sharma was awarded the Padma Shri in 2022 for Nautangi, Swang, Bhagat, _____ and Rasiya forms.

- Ans 1. Khoria
 2. Phag
 3. Rasleela
 4. Matki

Question ID : 264330111974
Option 1 ID : 264330439981
Option 2 ID : 264330439982
Option 3 ID : 264330439983
Option 4 ID : 264330439984
Status : Answered
Chosen Option : 3

Q.30 In which state is coffee a major plantation crop?

- Ans 1. Haryana
 2. Karnataka
 3. Assam
 4. Madhya Pradesh

Question ID : 264330173602
Option 1 ID : 264330680887
Option 2 ID : 264330680889
Option 3 ID : 264330680888
Option 4 ID : 264330680890
Status : Answered
Chosen Option : 2

Q.31 Which of the following elements has the highest atomic number?

- Ans 1. Copper
 2. Gold
 3. Silver
 4. Iron

Question ID : 264330173655
Option 1 ID : 264330681102
Option 2 ID : 264330681099
Option 3 ID : 264330681100
Option 4 ID : 264330681101
Status : Answered
Chosen Option : 2

Q.32 निम्नलिखित विजयनगर शासकों में से किसने विजयनगर के पास नागलापुरम नामक एक उपनगरीय बस्ती की स्थापना की?

- Ans 1. राम राय
 2. कृष्ण देव राय
 3. सदाशिव राय
 4. अच्युत देव राय

Question ID : 264330179077
Option 1 ID : 264330702311
Option 2 ID : 264330702312
Option 3 ID : 264330702314
Option 4 ID : 264330702313
Status : Answered
Chosen Option : 2

Q.33 निम्नलिखित में से कौन-सा राज्य का नीति निर्देशक सिद्धांत है?

- Ans 1. राष्ट्रीय संघर्ष के आदर्शों को संजोए रखना और उनका पालन करना
 2. व्यक्तिगत और सामूहिक गतिविधि के सभी क्षेत्रों में उत्कृष्टता की दिशा में प्रयास करना
 3. संविधान और उसके आदर्शों का पालन करना
 4. लोक कल्याण की अभिवृद्धि के लिए सामाजिक व्यवस्था बनाए रखना

Question ID : 264330110128
Option 1 ID : 264330432791
Option 2 ID : 264330432789
Option 3 ID : 264330432790
Option 4 ID : 264330432792
Status : Answered
Chosen Option : 4

Q.34 Which of the following statements is correct?

- a) India is the only country in the world that has both tigers and lions.
b) The natural habitat of the Indian lion is the Gir forest in Gujarat. Tigers are found in the forests of Madhya Pradesh, the Sundarbans of West Bengal and the Himalayan region.

- Ans 1. Only a is correct.
 2. Only b is correct.
 3. Both a and b are incorrect.
 4. Both a and b are correct.

Question ID : 264330178105

Option 1 ID : 264330698483

Option 2 ID : 264330698484

Option 3 ID : 264330698486

Option 4 ID : 264330698485

Status : Answered

Chosen Option : 2

Q.35 'The Test of My Life: From Cricket to Cancer and Back', is the autobiography of which famous Indian cricketer?

- Ans 1. Robin Utthappa
 2. Akash Chopra
 3. Suresh Raina
 4. Yuvraj Singh

Question ID : 264330112855

Option 1 ID : 264330443507

Option 2 ID : 264330443505

Option 3 ID : 264330443506

Option 4 ID : 264330443508

Status : Answered

Chosen Option : 4

Q.36 According to the 2011 census, which state has the highest sex ratio?

- Ans 1. Kerala
 2. Uttar Pradesh
 3. Maharashtra
 4. West Bengal

Question ID : 264330131754

Option 1 ID : 264330516115

Option 2 ID : 264330516117

Option 3 ID : 264330516118

Option 4 ID : 264330516116

Status : Answered

Chosen Option : 1

Q.37 Who wrote the famous autobiography titled 'Becoming'?

- Ans
- 1. Johnny Marr
 - 2. Steffi Graf
 - 3. Andre Agassi
 - 4. Michelle Obama

Question ID : 26433071467
Option 1 ID : 264330280295
Option 2 ID : 264330280294
Option 3 ID : 264330280293
Option 4 ID : 264330280292
Status : Answered
Chosen Option : 4

Q.38 Padma Shri awardee Madhuri Barthwal from _____ is a legendary folk singer. She was the first woman music composer for All India Radio.

- Ans
- 1. Punjab
 - 2. Uttar Pradesh
 - 3. Uttarakhand
 - 4. Haryana

Question ID : 264330111954
Option 1 ID : 264330439903
Option 2 ID : 264330439904
Option 3 ID : 264330439901
Option 4 ID : 264330439902
Status : Answered
Chosen Option : 2

Q.39 बिष्णुपुर मंदिर समूह भारत के किस राज्य में स्थित है?

- Ans
- 1. पश्चिम बंगाल
 - 2. मध्य प्रदेश
 - 3. असम
 - 4. बिहार

Question ID : 264330109651
Option 1 ID : 264330430883
Option 2 ID : 264330430884
Option 3 ID : 264330430881
Option 4 ID : 264330430882
Status : Answered
Chosen Option : 2

Q.40 What is the purpose of the 'EShakti' programme?

- Ans
- 1. Digitisation of Self-Help Group details for banks
 - 2. Giving electricity to women farmers
 - 3. Providing credit cards for women
 - 4. Providing loans to buy e-rickshaws

Question ID : 264330111721
Option 1 ID : 264330438970
Option 2 ID : 264330438972
Option 3 ID : 264330438971
Option 4 ID : 264330438969
Status : Answered
Chosen Option : 1

Q.41 Shovana Narayan is associated with which of these dance forms?

- Ans 1. Kathakali
 2. Kathak
 3. Bharatnatyam
 4. Mohiniyattam

Question ID : 264330109303
Option 1 ID : 264330429489
Option 2 ID : 264330429492
Option 3 ID : 264330429491
Option 4 ID : 264330429490
Status : Answered
Chosen Option : 2

Q.42 In which of the following states is the Thousand Pillar temple located, in which thousand pillars are built?

- Ans 1. Tamil Nadu
 2. Maharashtra
 3. Kerala
 4. Telangana

Question ID : 264330106250
Option 1 ID : 264330417302
Option 2 ID : 264330417301
Option 3 ID : 264330417304
Option 4 ID : 264330417303
Status : Answered
Chosen Option : 1

Q.43 Windfall gains are NOT included while calculating national income as _____.

- Ans 1. there is value addition
 2. it has already been included
 3. there is no income
 4. there is no productive activity connected with them

Question ID : 264330116513
Option 1 ID : 264330458139
Option 2 ID : 264330458140
Option 3 ID : 264330458138
Option 4 ID : 264330458137
Status : Answered
Chosen Option : 4

Q.44 Which body was responsible for formulating, implementing and regulating the five year plans before the year 2015?

- Ans 1. Reserve Bank of India
 2. Ministry of Rural Development
 3. Ministry of Finance
 4. Planning Commission

Question ID : 264330117738
Option 1 ID : 264330462770
Option 2 ID : 264330462769
Option 3 ID : 264330462767
Option 4 ID : 264330462768
Status : Answered
Chosen Option : 4

Q.45 In _____, as an immediate measure to resolve the balance of payments crisis, the Indian rupee was devalued against foreign currencies.

- Ans
- 1. 1971
 - 2. 1981
 - 3. 1991
 - 4. 1961

Question ID : 264330111574
Option 1 ID : 264330438382
Option 2 ID : 264330438383
Option 3 ID : 264330438384
Option 4 ID : 264330438381
Status : Answered
Chosen Option : 3

Q.46 _____ scheme was announced based on the five pillars to overcome difficulties caused due to COVID-19 in India.

- Ans
- 1. Atmanirbhar Bharat Abhiyan
 - 2. Swachh Bharat Abhiyan
 - 3. PM-JAY
 - 4. Ayushman Bharat

Question ID : 264330110007
Option 1 ID : 264330432305
Option 2 ID : 264330432306
Option 3 ID : 264330432308
Option 4 ID : 264330432307
Status : Answered
Chosen Option : 4

Q.47 The 'Sinhalese' ethnic group is found in which of the following countries?

- Ans
- 1. Nepal
 - 2. Myanmar
 - 3. Indonesia
 - 4. Sri Lanka

Question ID : 264330119828
Option 1 ID : 264330469590
Option 2 ID : 264330469587
Option 3 ID : 264330469589
Option 4 ID : 264330469588
Status : Answered
Chosen Option : 4

Q.48 Gandhiji participated in the _____ as a result of Gandhi-Irwin Pact.

- Ans
- 1. Second Round Table Conference
 - 2. Quit India Movement
 - 3. First Round Table Conference
 - 4. Khilafat movement

Question ID : 264330130557
Option 1 ID : 264330511342
Option 2 ID : 264330511341
Option 3 ID : 264330511339
Option 4 ID : 264330511340
Status : Answered
Chosen Option : 1

Q.49 Who composed the play 'Mrichchhakatika'?

- Ans 1. Bhans
 2. Atul
 3. Kalidasa
 4. Sudraka

Question ID : 264330119728
Option 1 ID : 264330469187
Option 2 ID : 264330469190
Option 3 ID : 264330469189
Option 4 ID : 264330469188
Status : Answered
Chosen Option : 4

Q.50 The Chief Justice of India will take prior permission from the _____, while appointing Adhoc Judges.

- Ans 1. Prime Minister of India
 2. Collegium of the Supreme Court
 3. Parliament
 4. President of India

Question ID : 264330120174
Option 1 ID : 264330470954
Option 2 ID : 264330470953
Option 3 ID : 264330470952
Option 4 ID : 264330470951
Status : Answered
Chosen Option : 4

Section : Reasoning


Q.1 Select the set in which the numbers are related in the same way as are the numbers of the following sets.

(NOTE : Operations should be performed on the whole numbers, without breaking down the numbers into its constituent digits. E.g. 13 – Operations on 13 such as adding /deleting /multiplying etc. to 13 can be performed. Breaking down 13 into 1 and 3 and then performing mathematical operations on 1 and 3 is not allowed.)
(63, 9, 36)
(105, 15, 60)

- Ans 1. (133, 17, 74)
 2. (129, 19, 74)
 3. (129, 17, 76)
 4. (133, 19, 76)

Question ID : 264330175039
Option 1 ID : 264330686531
Option 2 ID : 264330686532
Option 3 ID : 264330686533
Option 4 ID : 264330686534
Status : Answered
Chosen Option : 4

Q.2 How many triangles are there in the given figure?



- Ans
- 1. 14
 - 2. 12
 - 3. 11
 - 4. 13

Question ID : 26433091708

Option 1 ID : 264330360197

Option 2 ID : 264330360199

Option 3 ID : 264330360198

Option 4 ID : 264330360200

Status : Answered

Chosen Option : 1

Q.3 Select the correct combination of mathematical signs to sequentially replace the * signs and to balance the given equation.
 $8 * 14 * 3 * 24 * 7 = 168$

- Ans
- 1. $\times, \times, -, \times$
 - 2. $+, \times, -, \times$
 - 3. $+, \times, -, +$
 - 4. $\times, -, \times, +$

Question ID : 26433092502

Option 1 ID : 264330363299

Option 2 ID : 264330363300

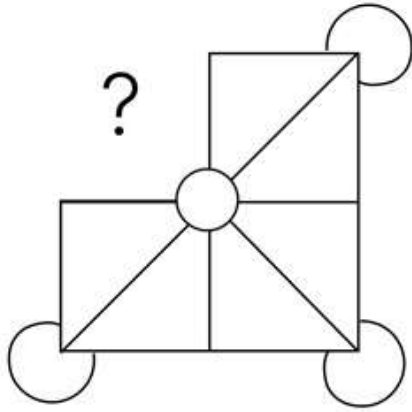
Option 3 ID : 264330363298

Option 4 ID : 264330363297

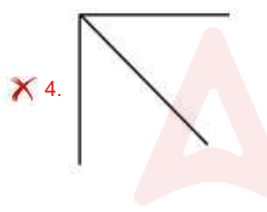
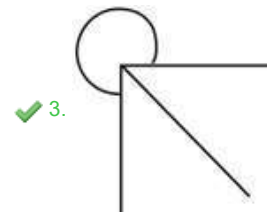
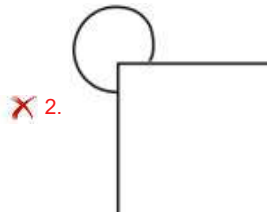
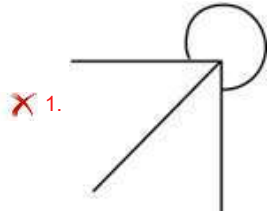
Status : Answered

Chosen Option : 1

Q.4 Select the figure from the given options that will replace the question mark (?) in the figure given below to complete the pattern so that the final image is symmetrical.



Ans



Question ID : 264330114728

Option 1 ID : 264330450999

Option 2 ID : 264330450998

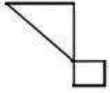
Option 3 ID : 264330451000

Option 4 ID : 264330450997

Status : Answered

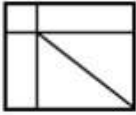
Chosen Option : 3

Q.5 Select the option in which the given figure is embedded (rotation is NOT allowed).




Ans

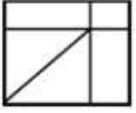
1.



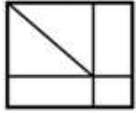
2.



3.



4.



Question ID : 264330101168

Option 1 ID : 264330397219


Option 2 ID : 264330397218

Option 3 ID : 264330397217

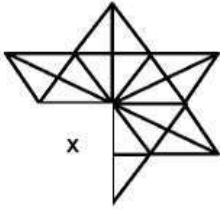
Option 4 ID : 264330397220

Status : Answered

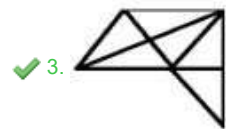
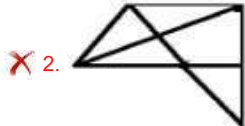
Chosen Option : 4



Q.6 Select a figure from amongst the four given options which, when placed in the blank space of figure (X), would complete the pattern.



Ans



Question ID : 264330102306

Option 1 ID : 264330401692

Option 2 ID : 264330401690

Option 3 ID : 264330401689

Option 4 ID : 264330401691

Status : Answered

Chosen Option : 3

Q.7 Three different positions of the same dice are shown. Find the number on the face opposite the face showing '3'.



Ans 1. 2

2. 5

3. 4

4. 1

Question ID : 264330116959

Option 1 ID : 264330459918

Option 2 ID : 264330459920

Option 3 ID : 264330459917

Option 4 ID : 264330459919

Status : Answered

Chosen Option : 2

Q.8 Which figure should replace the question mark (?) in the following series to continue the pattern?

B	E	U	T	T	U	E	O	U	E	O	T	T	O	E	△	
7	↑	0	B	△	7	7	B	△	U	6	7					?
	△			↑			6			B						

Ans

1.

O	T	△	E
6	7	B	
	U		

2.

T	O	E	△
7	U	6	
	☆		

3.

O	E	△	T
7	U	6	
	☆		

4.

O	E	△	T
6	7	B	
	U		

Question ID : 264330129622

Option 1 ID : 264330507857

Option 2 ID : 264330507854

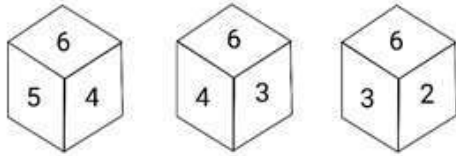
Option 3 ID : 264330507856

Option 4 ID : 264330507855

Status : Answered

Chosen Option : 3

Q.9 Three different positions of the same dice are shown. Find the number on the face opposite the face showing '3'.



- Ans
- 1. 6
 - 2. 1
 - 3. 4
 - 4. 5

Question ID : 264330116957

Option 1 ID : 264330459910

Option 2 ID : 264330459912

Option 3 ID : 264330459909

Option 4 ID : 264330459911

Status : Answered

Chosen Option : 4

Q.10 If 'A' denotes '+', 'B' denotes '×', 'C' denotes '-' and 'D' denotes '÷', then what will come in place of '?' in the following equation?
80 C 4 B 5 A 20 = ?

- Ans
- 1. 20
 - 2. 80
 - 3. 40
 - 4. 120

Question ID : 26433082475

Option 1 ID : 264330323733

Option 2 ID : 264330323734

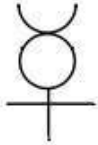
Option 3 ID : 264330323736

Option 4 ID : 264330323735

Status : Answered

Chosen Option : 2

Q.11 Select the option in which the given figure is embedded (rotation is NOT allowed).

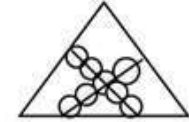


Ans

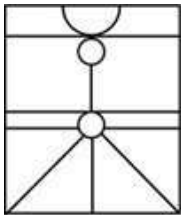
✗ 1.



✗ 2.



✗ 3.



✓ 4.



Question ID : 264330111672

Option 1 ID : 264330438776

Option 2 ID : 264330438773

Option 3 ID : 264330438774

Option 4 ID : 264330438775

Status : Answered

Chosen Option : 4

Q.12 Which of the following letter clusters will replace the question mark (?) in the given series to make it logically complete?
TVU, QSS, NPQ, KMO, ?

Ans ✗ 1. HKM

✗ 2. HKL

✗ 3. IKM

✓ 4. HJM

Question ID : 264330102227

Option 1 ID : 264330401373

Option 2 ID : 264330401374

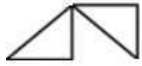
Option 3 ID : 264330401375

Option 4 ID : 264330401376

Status : Answered

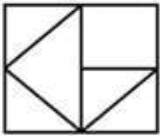
Chosen Option : 4

Q.13 Select the option in which the given figure is embedded (rotation is NOT allowed).

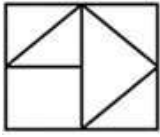


Ans

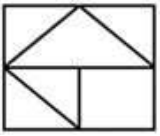
✗ 1.



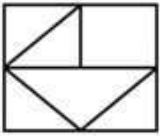
✓ 2.



✗ 3.



✗ 4.



Question ID : 264330101166

Option 1 ID : 264330397209

Option 2 ID : 264330397210

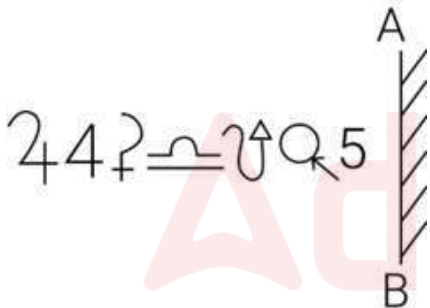
Option 3 ID : 264330397212

Option 4 ID : 264330397211

Status : Answered

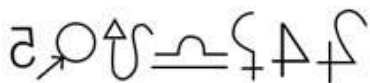
Chosen Option : 2

Q.14 Select the correct mirror image of the given figure when the mirror is placed at 'AB' as shown.

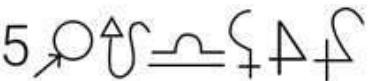


Ans

✓ 1.



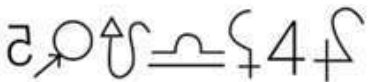
✗ 2.



✗ 3.



✗ 4.



Question ID : 264330114693

Option 1 ID : 264330450858

Option 2 ID : 264330450857

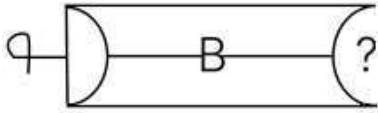
Option 3 ID : 264330450859

Option 4 ID : 264330450860

Status : Answered

Chosen Option : 1

Q.15 Select the figure from the given options that will replace the question mark (?) in the figure given below to complete the pattern so that the final image is symmetrical.



Ans

- ✓ 1.
- ✗ 2.
- ✗ 3.
- ✗ 4.

Question ID : 264330114724

Option 1 ID : 264330450981

Option 2 ID : 264330450984

Option 3 ID : 264330450983

Option 4 ID : 264330450982

Status : Answered

Chosen Option : 1

Q.16 Select the option that is related to the third term in the same way as the second term is related to the first term and the sixth term is related to the fifth term.
23 : 92 :: 44 : ? :: 32 : 128

- Ans
- ✗ 1. 204
 - ✗ 2. 160
 - ✗ 3. 172
 - ✓ 4. 176

Question ID : 264330102258

Option 1 ID : 264330401500

Option 2 ID : 264330401497

Option 3 ID : 264330401498

Option 4 ID : 264330401499

Status : Answered

Chosen Option : 4

Q.17 In a certain code language, 'HAND' is written as '16' and 'ENTRY' is written as '20'. How will 'AIRPORT' be written in that language?

- Ans
- ✗ 1. 24
 - ✗ 2. 26
 - ✓ 3. 28
 - ✗ 4. 22

Question ID : 26433089413

Option 1 ID : 264330351153

Option 2 ID : 264330351155

Option 3 ID : 264330351154

Option 4 ID : 264330351156

Status : Answered

Chosen Option : 3

Q.18 Select the option that is related to the fifth letter cluster in the same way as the second letter cluster is related to the first letter cluster and the fourth letter cluster is related to the third letter cluster.

GBEJ : DGBO :: TJDG : QOAL :: BAHQ : ?

- Ans
- 1. PLWM
 - 2. YFEV
 - 3. YFRM
 - 4. OJEH

Question ID : 26433074688
Option 1 ID : 264330292843
Option 2 ID : 264330292842
Option 3 ID : 264330292840
Option 4 ID : 264330292841
Status : Answered
Chosen Option : 2

Q.19 Select the number from the given options that can replace the question mark (?) in the following series.

3, 6, 12, 24, ?, 96

- Ans
- 1. 48
 - 2. 36
 - 3. 72
 - 4. 84

Question ID : 264330106386
Option 1 ID : 264330417846
Option 2 ID : 264330417845
Option 3 ID : 264330417847
Option 4 ID : 264330417848
Status : Answered
Chosen Option : 1

Adda247

Q.20 Which figure should replace the question mark (?) in the following series to continue the pattern?

☆	9	Z	∩	
∩ R	R ∩	☆ 9	9 ☆	?
Z 9 ☆	Z R	∩ Z	R	

Ans

✓ 1.

	R
Z ∩	
9 ☆	

✗ 2.

	☆
Z ∩	
R 9	

✗ 3.

	R
∩ Z	
☆ 9	

✗ 4.

	☆
Z R	
9 ∩	

Question ID : 264330129608

Option 1 ID : 264330507798

Option 2 ID : 264330507801

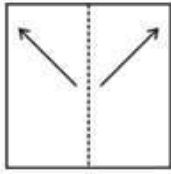
Option 3 ID : 264330507799

Option 4 ID : 264330507800

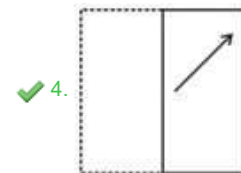
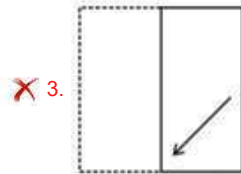
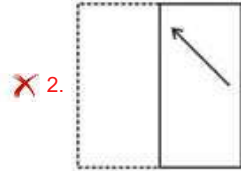
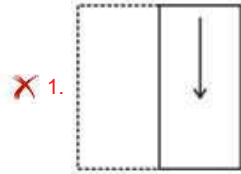
Status : Answered

Chosen Option : 1

Q.21 A square transparent sheet with a pattern is shown in the given figure. How will the pattern appear when the transparent sheet is folded at the dotted line.



Ans



Question ID : 264330117837

Option 1 ID : 264330463165

Option 2 ID : 264330463163

Option 3 ID : 264330463166

Option 4 ID : 264330463164

Status : Answered

Chosen Option : 4

Q.22 Which figure should replace the question mark (?) in the following series to continue the pattern?

P	D	E	3	P	I	O	E	P	D	O	I	
3	O		O	D		D	3		3	E		?
	X	I		E	X		X	I		P	X	

Ans

✗ 1.

I	D	O
X	3	
	E	P

✗ 2.

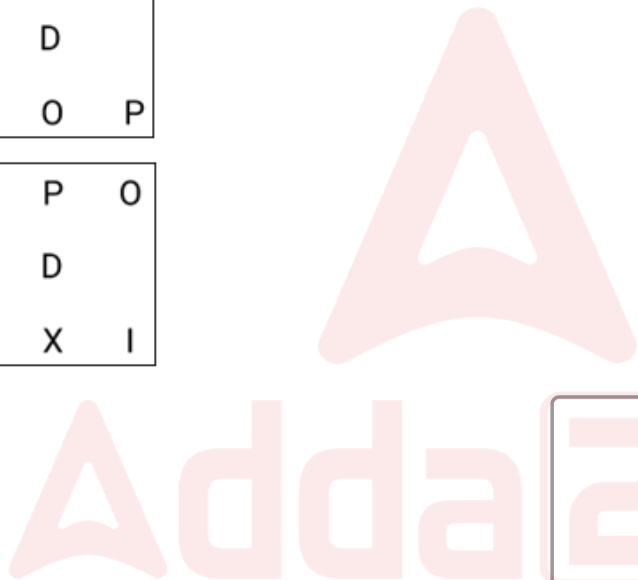
E	P	D
X	O	
	E	I

✗ 3.

3	I	X
E	D	
	O	P

✓ 4.

3	P	O
E	D	
	X	I



Question ID : 264330129623
Option 1 ID : 264330507858
Option 2 ID : 264330507860
Option 3 ID : 264330507861
Option 4 ID : 264330507859
Status : Answered
Chosen Option : 4

Q.23 Read the given statements and conclusions carefully. Assuming that the information given in the statements is true, even if it appears to be at variance with commonly known facts, decide which of the given conclusions logically follow(s) from the statements.

Statements:

Some balloons are cars.

Some cars are rockets.

Conclusions:

I. Some rockets are balloons.

II. All rockets are balloons.

Ans ✓ 1. Neither conclusion I nor II follows

✗ 2. Only conclusion I follows

✗ 3. Only conclusion II follows

✗ 4. Both conclusions I and II follow

Question ID : 26433068292

Option 1 ID : 264330267683

Option 2 ID : 264330267680

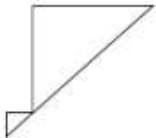
Option 3 ID : 264330267681

Option 4 ID : 264330267682

Status : Answered

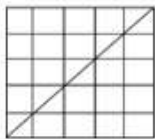
Chosen Option : 1

Q.24 Select the option in which the given figure is embedded (rotation is NOT allowed).



Ans

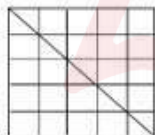
✓ 1.



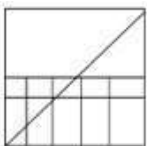
✗ 2.



✗ 3.



✗ 4.



Question ID : 264330112983

Option 1 ID : 264330444020

Option 2 ID : 264330444017

Option 3 ID : 264330444019

Option 4 ID : 264330444018

Status : Answered

Chosen Option : 1

Q.25 6 persons are sitting around a circular table facing the centre, with each person facing another person. Anshu is between Rohin and Sonal. Rohin is opposite to Leena. Fizza is not the immediate neighbour of Rohin. Who is sitting opposite to Prabhleen?

- Ans
- 1. Sonal
 - 2. Leena
 - 3. Anshu
 - 4. Fizza

Question ID : 26433086246
Option 1 ID : 264330338680
Option 2 ID : 264330338678
Option 3 ID : 264330338677
Option 4 ID : 264330338679
Status : Answered
Chosen Option : 1

Section : Numerical Ability

Q.1 A shopkeeper is offering 10% discount on a shirt marked at ₹4,000 and still earns a profit of 20%. What is the cost price (in ₹)?

- Ans
- 1. 3,200
 - 2. 3,333
 - 3. 3,600
 - 4. 3,000

Question ID : 264330130002
Option 1 ID : 264330509242
Option 2 ID : 264330509240
Option 3 ID : 264330509239
Option 4 ID : 264330509241
Status : Answered
Chosen Option : 4

Q.2 Find the volume (in cm^3) of a cylinder with the diameter of base 8 cm and height 35 cm.

(Take $\pi = \frac{22}{7}$)

- Ans
- 1. 1760
 - 2. 1792
 - 3. 1780
 - 4. 1731

Question ID : 264330112437
Option 1 ID : 264330441833
Option 2 ID : 264330441836
Option 3 ID : 264330441835
Option 4 ID : 264330441834
Status : Answered
Chosen Option : 1

Q.3 The average weight of the first 14 persons among 15 persons is 80 kg. The weight of the 15th person is 42 kg more than the average weight of all 15 persons. Find the weight (in Kg) of the 15th person.

- Ans
- 1. 127
 - 2. 121
 - 3. 125
 - 4. 123

Question ID : 264330131841
Option 1 ID : 264330516466
Option 2 ID : 264330516463
Option 3 ID : 264330516465
Option 4 ID : 264330516464
Status : Answered
Chosen Option : 3

Q.4 Find the area (in square cm) of a right angled triangle whose altitude is 7 cm less than its base and its hypotenuse is 17 cm.

- Ans
- 1. 48
 - 2. 84
 - 3. 72
 - 4. 60

Question ID : 264330130123
Option 1 ID : 264330509723
Option 2 ID : 264330509726
Option 3 ID : 264330509725
Option 4 ID : 264330509724
Status : Answered
Chosen Option : 4

Q.5 How much should you invest today at 10% compound interest annually to accumulate ₹1,46,410 in 4 years?

- Ans
- 1. ₹1,00,000
 - 2. ₹1,10,000
 - 3. ₹1,11,100
 - 4. ₹1,00,500

Question ID : 264330106011
Option 1 ID : 264330416347
Option 2 ID : 264330416345
Option 3 ID : 264330416348
Option 4 ID : 264330416346
Status : Answered
Chosen Option : 1

Q.6 Deepa deposited ₹10,000 in a bank on simple interest. After 4 years, she received an amount of ₹12,400. Find the rate of interest.

- Ans**
- 1. 6% p.a.
 - 2. 7% p.a.
 - 3. 5.5% p.a.
 - 4. 6.5% p.a.

Question ID : 264330118082
Option 1 ID : 264330464145
Option 2 ID : 264330464143
Option 3 ID : 264330464146
Option 4 ID : 264330464144
Status : Answered
Chosen Option : 1

Q.7 The largest 4-digit prime number is:

- Ans**
- 1. 9991
 - 2. 9967
 - 3. 9983
 - 4. 9973

Question ID : 264330104480
Option 1 ID : 264330410224
Option 2 ID : 264330410221
Option 3 ID : 264330410223
Option 4 ID : 264330410222
Status : Answered
Chosen Option : 3

Q.8 A man takes 40 minutes to cover a certain distance at a speed of 9 km/h. If he walks with a speed of 12 km/h, he covers the same distance in:

- Ans**
- 1. 28 minutes
 - 2. 32 minutes
 - 3. 25 minutes
 - 4. 30 minutes

Question ID : 264330106014
Option 1 ID : 264330416358
Option 2 ID : 264330416360
Option 3 ID : 264330416357
Option 4 ID : 264330416359
Status : Answered
Chosen Option : 4

Q.9 Ram and Naresh can complete a work together in 20 days and Naresh and Shyam together in 15 days. All three together can complete the work in 12 days. In how many days can Ram and Shyam together complete the work?

- Ans
- 1. 26
 - 2. 28
 - 3. 20
 - 4. 25

Question ID : 264330104326
Option 1 ID : 264330409607
Option 2 ID : 264330409608
Option 3 ID : 264330409605
Option 4 ID : 264330409606
Status : Answered
Chosen Option : 3

Q.10 If $3y = A$ and $6A = 3B$, then $\frac{y}{B}$ is:

- Ans
- 1. $\frac{6}{1}$
 - 2. $\frac{1}{5}$
 - 3. $\frac{1}{3}$
 - 4. $\frac{1}{6}$

Question ID : 264330130936
Option 1 ID : 264330512857
Option 2 ID : 264330512858
Option 3 ID : 264330512856
Option 4 ID : 264330512855
Status : Answered
Chosen Option : 4

Q.11 What is the smallest number which leaves remainder 3 when divided by any of the numbers 5, 8 and 9, but leaves no remainder when it is divided by 11?

- Ans
- 1. 363
 - 2. 563
 - 3. 463
 - 4. 663

Question ID : 264330104268
Option 1 ID : 264330409373
Option 2 ID : 264330409375
Option 3 ID : 264330409374
Option 4 ID : 264330409376
Status : Answered
Chosen Option : 1

Q.12 Amit received his monthly salary. The ratio of his expenditure to savings is 3 : 2. What percentage of his salary did he spend and what percentage was saved by him, respectively?

- Ans 1. 60% and 40%
2. 65% and 35%
3. 70% and 30%
4. 55% and 45%

Question ID : 264330104393

Option 1 ID : 264330409875

Option 2 ID : 264330409874

Option 3 ID : 264330409873

Option 4 ID : 264330409876

Status : Answered

Chosen Option : 1

Q.13 Find the number of ways in which 960 can be written as the product of two numbers that are co-prime to each other.

- Ans 1. 6
2. 2
3. 4
4. 8

Question ID : 264330111447

Option 1 ID : 264330437875

Option 2 ID : 264330437873

Option 3 ID : 264330437874

Option 4 ID : 264330437876

Status : Answered

Chosen Option : 3

Q.14 A person has some amount initially. He gives 30% of the amount to his wife. Then from the remaining amount, he gives 20%, 20% and 15%, respectively, to both his sons and one daughter. Now from the amount left, he pays $\frac{1}{3}$ of the amount as house rent and the remaining amount of ₹33,600 he deposits in the bank. Find his initial amount.

- Ans 1. ₹1,00,000
2. ₹1,40,000
3. ₹1,60,000
4. ₹1,20,000

Question ID : 264330129926

Option 1 ID : 264330508937

Option 2 ID : 264330508935

Option 3 ID : 264330508936

Option 4 ID : 264330508938

Status : Answered

Chosen Option : 3

Q.15 The selling price of 61 items is equal to the cost price of 53 items. What is the profit or loss percentage (rounded off to two decimal places)?

- Ans**
- 1. 8.25% loss
 - 2. 8.25% profit
 - 3. 13.11% loss
 - 4. 13.11% profit

Question ID : 264330126514
Option 1 ID : 264330495729
Option 2 ID : 264330495728
Option 3 ID : 264330495731
Option 4 ID : 264330495730
Status : Answered
Chosen Option : 3

Section : Computer Proficiency

Q.1 When replying to an email, what is the key difference between 'Reply' and 'Reply all'?

- Ans**
- 1. 'Reply' forwards email to specific contacts, while 'Reply all' forwards the original email to all contacts in the address book.
 - 2. 'Reply' allows you to edit the original email's content before sending the response, while 'Reply all' automatically includes the entire original email's content in the response.
 - 3. 'Reply' sends the response only to the original sender, while 'Reply all' sends the response to all recipients of the original email.
 - 4. 'Reply' attaches any files from the original email, while 'Reply all' includes any attachments along with the entire original email's content in response.

Question ID : 264330176673
Option 1 ID : 264330692910
Option 2 ID : 264330692907
Option 3 ID : 264330692908
Option 4 ID : 264330692909
Status : Answered
Chosen Option : 3

Q.2 In MS word 365 To change the formatting of the text to match the formatting of other text in a document, which of the following tools can be used?

- Ans**
- 1. Format painter
 - 2. Paragraph alignment
 - 3. SmartArt
 - 4. Change styles

Question ID : 264330175973
Option 1 ID : 264330690188
Option 2 ID : 264330690189
Option 3 ID : 264330690187
Option 4 ID : 264330690190
Status : Answered
Chosen Option : 1

Q.3 In MS Excel 365 which of the following keyboard shortcuts is used to save a workbook in MS-Excel?

- Ans
- 1. Ctrl + S
 - 2. Ctrl + Alt + S
 - 3. Shift + S
 - 4. Ctrl + Shift + S

Question ID : 264330178259
Option 1 ID : 264330699091
Option 2 ID : 264330699093
Option 3 ID : 264330699094
Option 4 ID : 264330699092
Status : Answered
Chosen Option : 1

Q.4 In Microsoft Word 2019, which option is common in both the 'Indents & Spacing' and 'Line & Page Breaks' tabs of the 'Paragraph' dialog box?

- Ans
- 1. Preview
 - 2. General
 - 3. Textbox options
 - 4. Indentation

Question ID : 264330182755
Option 1 ID : 264330716792
Option 2 ID : 264330716791
Option 3 ID : 264330716793
Option 4 ID : 264330716794
Status : Answered
Chosen Option : 1

Q.5 In MS Excel 365, when you right-click on a cell and select 'Filter,' which of the following options is NOT visible?

- Ans
- 1. Filter by selected cell colour
 - 2. Filter by selected cell font
 - 3. Filter by selected cell height
 - 4. Filter by selected cell values

Question ID : 264330182056
Option 1 ID : 264330714065
Option 2 ID : 264330714064
Option 3 ID : 264330714066
Option 4 ID : 264330714063
Status : Answered
Chosen Option : 3

Q.6 In MS Excel 2007, which option is used for opening a new or existing spreadsheet?

- Ans
- 1. Home
 - 2. Insert
 - 3. Format
 - 4. Office button

Question ID : 264330180684
Option 1 ID : 264330708703
Option 2 ID : 264330708704
Option 3 ID : 264330708706
Option 4 ID : 264330708705
Status : Answered
Chosen Option : 1

Q.7 Which of the following is the correct option to draw a line through the middle of text in MS Word 365?

- Ans
- 1. Line
 - 2. Strikethrough
 - 3. Dash
 - 4. Underline

Question ID : 264330176723
Option 1 ID : 264330693109
Option 2 ID : 264330693107
Option 3 ID : 264330693110
Option 4 ID : 264330693108
Status : Answered
Chosen Option : 2

Q.8 Which layer of the internet architecture model is responsible for routing packets between networks?

- Ans
- 1. Transport layer
 - 2. Data link layer
 - 3. Network layer
 - 4. Application layer

Question ID : 264330178550
Option 1 ID : 264330700228
Option 2 ID : 264330700230
Option 3 ID : 264330700229
Option 4 ID : 264330700227
Status : Answered
Chosen Option : 2

Q.9 Which of the following best describes the difference between Save and Save As?

- Ans
- 1. 'Save' is used to save file in a local computer, while 'Save As' is used to save it on cloud.
 - 2. 'Save' is used to save file as read only file, while 'Save As' is used to save it as editable file.
 - 3. 'Save' is used to save the document for the first time, while 'Save As' is used to save the document with a new name or different file format.
 - 4. 'Save' is used to save file in compressed manner, while 'Save As' is used to save it as it is.

Question ID : 264330176718
Option 1 ID : 264330693088
Option 2 ID : 264330693087
Option 3 ID : 264330693089
Option 4 ID : 264330693090
Status : Answered
Chosen Option : 3

Q.10 Which of the following options will allow you to set text within a paragraph at different margins in MS Word 365?

- Ans**
- 1. Page breaks
 - 2. Border
 - 3. Line spacing
 - 4. Indenting

Question ID : 264330180838

Option 1 ID : 264330709315

Option 2 ID : 264330709317

Option 3 ID : 264330709316

Option 4 ID : 264330709318

Status : Answered

Chosen Option : 4



Constable Executive Male and Female in Delhi Police Examination 2023

Roll Number	
Candidate Name	
Venue Name	OCBT IT services
Exam Date	20/11/2023
Exam Time	9:00 AM - 10:30 AM
Subject	Constable Executive Male and Female in Delhi Police Examination 2023

Section : General Knowledge

Q.1 " _____ is the writer of the book 'India Wins Freedom'."

Ans 1. Maulana Abul Kalam Azad

2. APJ Abdul Kalam

3. Jawahar Lal Nehru

4. Mahatma Gandhi

Question ID : 26433054234

Option 1 ID : 264330211922

Option 2 ID : 264330211923

Option 3 ID : 264330211921

Option 4 ID : 264330211920

Status : Answered

Chosen Option : 2

Q.2 _____ accounts for the difference between the concept of market price and factor cost in national income measurement.

Ans 1. Indirect taxes

2. Subsidies

3. Direct taxes

4. Net indirect taxes

Question ID : 264330120864

Option 1 ID : 264330473674

Option 2 ID : 264330473672

Option 3 ID : 264330473671

Option 4 ID : 264330473673

Status : Answered

Chosen Option : 2

Q.3 Madan Singh Chauhan, also known as 'Guruji', is a folk and Sufi singer from _____.

Ans 1. Jharkhand

2. Uttarakhand

3. Haryana

4. Chhattisgarh

Question ID : 264330110245

Option 1 ID : 264330433258

Option 2 ID : 264330433259

Option 3 ID : 264330433260

Option 4 ID : 264330433257

Status : Not Answered

Chosen Option : --

Q.4 Which Article of the Indian Constitution mentions that the laws inconsistent with or in derogation of the fundamental rights will be void?

- Ans
- 1. Article15
 - 2. Article 13
 - 3. Article14
 - 4. Article16

Question ID : 264330180044
Option 1 ID : 264330706161
Option 2 ID : 264330706159
Option 3 ID : 264330706160
Option 4 ID : 264330706162
Status : Answered
Chosen Option : 2

Q.5 Which of the following was the last Five-Year Plan in India before its replacement with NITI Aayog?

- Ans
- 1. 12th Five-Year Plan 2012-2017
 - 2. 11th Five-Year Plan 2007-2012
 - 3. 9th Five-Year Plan 2007-2012
 - 4. 10th Five-Year Plan 2007-2012

Question ID : 264330118542
Option 1 ID : 264330465572
Option 2 ID : 264330465571
Option 3 ID : 264330465569
Option 4 ID : 264330465570
Status : Answered
Chosen Option : 1

Q.6 Pillared Verandah and cells are integral parts of which of the following Buddhist structures?

- Ans
- 1. Tawang Monastery
 - 2. Ajanta Caves
 - 3. Bodhgaya Temple
 - 4. Sanchi Stupa

Question ID : 264330109636
Option 1 ID : 264330430824
Option 2 ID : 264330430821
Option 3 ID : 264330430823
Option 4 ID : 264330430822
Status : Not Answered
Chosen Option : --

Q.7 Manipuri dance often depicts scenes from the life of which of the following Hindu Gods or Goddess?

- Ans
- 1. Goddess Durga
 - 2. Lord Krishna
 - 3. Lord Ram
 - 4. Lord Hanuman

Question ID : 264330110399
Option 1 ID : 264330433873
Option 2 ID : 264330433875
Option 3 ID : 264330433874
Option 4 ID : 264330433876
Status : Answered
Chosen Option : 2

Q.8 Who can give the order and directives to the government for the enforcement of fundamental rights?

- Ans
- 1. Prime Minister of India
 - 2. President of India
 - 3. Governor
 - 4. Supreme Court and High Court

Question ID : 264330116391
Option 1 ID : 264330457651
Option 2 ID : 264330457650
Option 3 ID : 264330457652
Option 4 ID : 264330457649
Status : Answered
Chosen Option : 4

Q.9 When government wants to increase the money supply, it:

- Ans
- 1. purchases government bonds
 - 2. sells government bonds
 - 3. increases the Cash Reserve Ratio
 - 4. increases the Statutory Liquidity Ratio

Question ID : 264330116505
Option 1 ID : 264330458108
Option 2 ID : 264330458107
Option 3 ID : 264330458105
Option 4 ID : 264330458106
Status : Answered
Chosen Option : 2

Q.10 In which of the following years was the peasant movement in Kheda led by Mahatma Gandhi?

- Ans
- 1. 1918
 - 2. 1909
 - 3. 1922
 - 4. 1912

Question ID : 264330112409
Option 1 ID : 264330441723
Option 2 ID : 264330441721
Option 3 ID : 264330441724
Option 4 ID : 264330441722
Status : Answered
Chosen Option : 1

Q.11 The _____ Rebellion in central India broke out in 1910.

- Ans
- 1. Warli
 - 2. Pabna
 - 3. Kol
 - 4. Bastar

Question ID : 264330114103
Option 1 ID : 264330448497
Option 2 ID : 264330448499
Option 3 ID : 264330448498
Option 4 ID : 264330448500
Status : Answered
Chosen Option : 1

Q.12 Consider the following factors.

- a) Extreme climatic conditions in the Himalayas and the Indian Thar Desert.
 - b) Lack of medical facilities in rural areas.
 - c) Availability of employment in metro cities.
 - d) Poverty in rural India.
 - e) Education facilities in urban areas.
- Which of the given factors are NOT pull factor(s) for migration in India?

- Ans
- 1. Only a, b and d
 - 2. All except d
 - 3. Only c and e
 - 4. Only b and d

Question ID : 264330120340
Option 1 ID : 264330471611
Option 2 ID : 264330471612
Option 3 ID : 264330471613
Option 4 ID : 264330471614
Status : Answered
Chosen Option : 2

Q.13 The 'Make in India' programme, which started in 2014, is similar to _____ of the 1970s and 1980s in India.

- Ans
- 1. Import substitution policy
 - 2. License permit raj
 - 3. Export-oriented industrial development
 - 4. Free trade policy

Question ID : 264330111747
Option 1 ID : 264330439073
Option 2 ID : 264330439074
Option 3 ID : 264330439076
Option 4 ID : 264330439075
Status : Answered
Chosen Option : 2

Q.14 The Ajanta Caves are located on the left bank of which of the following rivers?

- Ans 1. Waghora
 2. Krishna
 3. Mahanadi
 4. Tungabhadra

Question ID : 264330111846
Option 1 ID : 264330439472
Option 2 ID : 264330439469
Option 3 ID : 264330439471
Option 4 ID : 264330439470
Status : Answered
Chosen Option : 2

Q.15 Rajaraja I, who assumed power in 985 CE and was known as one of the most powerful kings in South India, belonged to the _____ dynasty.

- Ans 1. Chalukaya
 2. Chola
 3. Pallava
 4. Pandya

Question ID : 264330118967
Option 1 ID : 264330466526
Option 2 ID : 264330466524
Option 3 ID : 264330466523
Option 4 ID : 264330466525
Status : Answered
Chosen Option : 2

Q.16 Junagadh Rock Inscription belongs to whom among the following rulers?

- Ans 1. Bindusara
 2. Satakarni I
 3. Rudradaman I
 4. Kanishka

Question ID : 264330171477
Option 1 ID : 264330672525
Option 2 ID : 264330672524
Option 3 ID : 264330672523
Option 4 ID : 264330672526
Status : Answered
Chosen Option : 3

Q.17 Nadaswaran instrument is played by _____ .

- Ans 1. Sheikh Chinna Moula
 2. KV Prasad
 3. Panalal Ghosh
 4. Totaram Sarma

Question ID : 264330111943
Option 1 ID : 264330439858
Option 2 ID : 264330439860
Option 3 ID : 264330439859
Option 4 ID : 264330439857
Status : Answered
Chosen Option : 4

Q.18 Non-stick pans are coated with _____.

- Ans
- 1. polytetrabromoethylene
 - 2. polytetrachloroethylene
 - 3. polytetrafluoromethylene
 - 4. polytetrafluoroethylene

Question ID : 264330117616
Option 1 ID : 264330462492
Option 2 ID : 264330462491
Option 3 ID : 264330462490
Option 4 ID : 264330462489
Status : Not Answered
Chosen Option : --

Q.19 Kalyani Kutti Amma received the Sangeet Natak Akademi Award for which form of dance?

- Ans
- 1. Kathakali
 - 2. Kuchipudi
 - 3. Mohiniattam
 - 4. Kathak

Question ID : 26433074872
Option 1 ID : 264330293577
Option 2 ID : 264330293576
Option 3 ID : 264330293579
Option 4 ID : 264330293578
Status : Answered
Chosen Option : 1

Q.20 Who is the author of the work 'Kadambari'?

- Ans
- 1. Banabhatta
 - 2. Vilhad
 - 3. Aryabhata
 - 4. Bhans

Question ID : 264330120008
Option 1 ID : 264330470290
Option 2 ID : 264330470288
Option 3 ID : 264330470287
Option 4 ID : 264330470289
Status : Answered
Chosen Option : 1

Q.21 Which of the following taxes was related to the land revenue (tax on agricultural land) system of the Delhi sultanate?

- Ans
- 1. Khams
 - 2. Zakat
 - 3. Kharaj
 - 4. Jizya

Question ID : 264330111378
Option 1 ID : 264330437599
Option 2 ID : 264330437597
Option 3 ID : 264330437600
Option 4 ID : 264330437598
Status : Answered
Chosen Option : 3

Q.22 Wangala is a popular harvest festival of which Indian state?

- Ans 1. Uttar Pradesh
 2. Bihar
 3. Meghalaya
 4. West Bengal

Question ID : 264330132408
Option 1 ID : 264330518727
Option 2 ID : 264330518729
Option 3 ID : 264330518728
Option 4 ID : 264330518730
Status : Answered
Chosen Option : 3

Q.23 In which state of Myanmar do the Rohingyas primarily reside?

- Ans 1. Shan
 2. Kayah
 3. Chin
 4. Rakhine

Question ID : 264330179304
Option 1 ID : 264330703220
Option 2 ID : 264330703222
Option 3 ID : 264330703221
Option 4 ID : 264330703219
Status : Not Answered
Chosen Option : --

Q.24 Which of the following is an INCORRECT statement related to dental health?

- Ans 1. Tooth enamel, made up of calcium hydroxyapatite is the hardest substance in the body.
 2. Bacteria present in the mouth produce acids by degradation of sugar and food particles remaining in the mouth after eating.
 3. Tooth decay starts when the pH of the mouth is lower than 5.5.
 4. Toothpaste, which is generally acidic, prevents tooth decay.

Question ID : 264330177336
Option 1 ID : 264330695538
Option 2 ID : 264330695536
Option 3 ID : 264330695535
Option 4 ID : 264330695537
Status : Answered
Chosen Option : 4

Q.25 Padma Shri awardee Pratibha Prahad is an exponent of which of the following dance forms?

- Ans 1. Kathak
 2. Kuchipudi
 3. Odissi
 4. Bharatanatyam

Question ID : 264330106200
Option 1 ID : 264330417102
Option 2 ID : 264330417103
Option 3 ID : 264330417104
Option 4 ID : 264330417101
Status : Not Answered
Chosen Option : --

Q.26 Raja Reddy is associated with which of the following dance forms?

- Ans 1. Bharatanatyam
 2. Kuchipudi
 3. Kathakali
 4. Kathak

Question ID : 264330109300
Option 1 ID : 264330429477
Option 2 ID : 264330429480
Option 3 ID : 264330429478
Option 4 ID : 264330429479
Status : Answered
Chosen Option : 2

Q.27 The atomic number of oxygen is _____.

- Ans 1. 7
 2. 16
 3. 8
 4. 14

Question ID : 264330173657
Option 1 ID : 264330681110
Option 2 ID : 264330681107
Option 3 ID : 264330681109
Option 4 ID : 264330681108
Status : Answered
Chosen Option : 3

Q.28 Which of the following years is related to the SARFAESI Act?

- Ans 1. 2002
 2. 2000
 3. 1999
 4. 2004

Question ID : 26433059324
Option 1 ID : 264330232174
Option 2 ID : 264330232173
Option 3 ID : 264330232172
Option 4 ID : 264330232175
Status : Not Answered
Chosen Option : --

Q.29 Which mineral composed of silicon and oxygen with chemical composition of SiO_2 is mainly used in glass making, abrasive, foundry sand, hydraulic fracturing proppant, gemstone?

- Ans 1. Olivine
 2. Muscovite
 3. Augite
 4. Quartz

Question ID : 264330141736
Option 1 ID : 264330555264
Option 2 ID : 264330555265
Option 3 ID : 264330555266
Option 4 ID : 264330555263
Status : Answered
Chosen Option : 4

Q.30 Which of the following Union territories has the lowest population density according to the 2011 census?

- Ans
- 1. Delhi
 - 2. Andaman and Nicobar Islands
 - 3. Daman and Diu
 - 4. Puducherry

Question ID : 264330120321
Option 1 ID : 264330471535
Option 2 ID : 264330471538
Option 3 ID : 264330471537
Option 4 ID : 264330471536
Status : Answered
Chosen Option : 2

Q.31 The level of urbanisation in India is measured in terms of _____ of urban population to total population.

- Ans
- 1. decimal
 - 2. ratio
 - 3. fraction
 - 4. percentage

Question ID : 264330120314
Option 1 ID : 264330471510
Option 2 ID : 264330471508
Option 3 ID : 264330471507
Option 4 ID : 264330471509
Status : Answered
Chosen Option : 4

Q.32 The 'Rashtriya Swayamsevak Sangh' was founded in which of the following districts of Maharashtra?

- Ans
- 1. Amravati
 - 2. Nagpur
 - 3. Ahmednagar
 - 4. Pune

Question ID : 264330119019
Option 1 ID : 264330466733
Option 2 ID : 264330466731
Option 3 ID : 264330466734
Option 4 ID : 264330466732
Status : Not Answered
Chosen Option : --

Q.33 The Joint Sitting of the Lok Sabha and Rajya Sabha need a _____ quorum of the Indian Parliament.

- Ans
- 1. 15%
 - 2. 5%
 - 3. 20%
 - 4. 10%

Question ID : 264330120182
Option 1 ID : 264330470984
Option 2 ID : 264330470983
Option 3 ID : 264330470986
Option 4 ID : 264330470985
Status : Answered
Chosen Option : 4

Q.34 The length of a tennis court is _____ .

- Ans
- 1. 78 ft
 - 2. 70 ft
 - 3. 80 ft
 - 4. 73 ft

Question ID : 264330113768
Option 1 ID : 264330447159
Option 2 ID : 264330447157
Option 3 ID : 264330447160
Option 4 ID : 264330447158
Status : Answered
Chosen Option : 4

Q.35 Suryakumar Yadav is associated with which of the following games?

- Ans
- 1. Boxing
 - 2. Football
 - 3. Cricket
 - 4. Wrestling

Question ID : 264330118901
Option 1 ID : 264330466261
Option 2 ID : 264330466259
Option 3 ID : 264330466260
Option 4 ID : 264330466262
Status : Answered
Chosen Option : 3

Q.36 The method of Election of the President of the India in the Constitution was taken from the Constitution of _____.

- Ans
- 1. Ireland
 - 2. Canada
 - 3. South Africa
 - 4. the Unites States of America

Question ID : 264330134563
Option 1 ID : 264330527210
Option 2 ID : 264330527208
Option 3 ID : 264330527209
Option 4 ID : 264330527207
Status : Answered
Chosen Option : 1

Q.37 President Sukarno of _____ was the Guest of Honour during India's first Republic Day event in 1950.

- Ans 1. Indonesia
 2. Malaysia
 3. Maldives
 4. Singapore

Question ID : 264330113180
Option 1 ID : 264330444807
Option 2 ID : 264330444805
Option 3 ID : 264330444808
Option 4 ID : 264330444806
Status : Answered
Chosen Option : 1

Q.38 Under 'Atal Beemit Vyakti Kalyan Yojana', up to how much per cent of average wages is provided as payment relief which is payable up to maximum 90 days of unemployment?

- Ans 1. 50%
 2. 30%
 3. 25%
 4. 33%

Question ID : 264330111591
Option 1 ID : 264330438452
Option 2 ID : 264330438450
Option 3 ID : 264330438449
Option 4 ID : 264330438451
Status : Not Answered
Chosen Option : --

Q.39 Which of the following is a push factor of globalisation of business?

- Ans 1. Availability of cheap raw material in the host country
 2. Higher rates of return in host economies
 3. Availability of cheap labour in the host country
 4. Saturation of domestic market

Question ID : 264330112491
Option 1 ID : 264330442050
Option 2 ID : 264330442052
Option 3 ID : 264330442049
Option 4 ID : 264330442051
Status : Answered
Chosen Option : 2

Q.40 The Bokaro Steel Plant is located in:

- Ans 1. Maharashtra
 2. Chhattisgarh
 3. Rajasthan
 4. Jharkhand

Question ID : 264330178711
Option 1 ID : 264330700871
Option 2 ID : 264330700873
Option 3 ID : 264330700874
Option 4 ID : 264330700872
Status : Answered
Chosen Option : 4

Q.41 The term 'village panchayats' is mentioned in which of the following Articles of the Constitution of India?

- Ans
- 1. Article 47
 - 2. Article 40
 - 3. Article 49
 - 4. Article 51

Question ID : 264330180881
Option 1 ID : 264330709488
Option 2 ID : 264330709487
Option 3 ID : 264330709489
Option 4 ID : 264330709490
Status : Answered
Chosen Option : 2

Q.42 The Siberian Shelf, one of the coastal shelves of the Arctic Ocean, is the largest continental shelf on Earth. How many kilometres does it extend offshore?

- Ans
- 1. 600 km
 - 2. 910 km
 - 3. 1,700 km
 - 4. 1,500 km

Question ID : 264330113526
Option 1 ID : 264330446189
Option 2 ID : 264330446190
Option 3 ID : 264330446192
Option 4 ID : 264330446191
Status : Answered
Chosen Option : 4

Q.43 Which of the following does NOT play a crucial role in shaping Indian monsoons?

- Ans
- 1. Jet Stream
 - 2. Western Disturbances
 - 3. Intertropical Convergence Zone (ITCZ)
 - 4. Tibetan Plateau

Question ID : 264330179011
Option 1 ID : 264330702048
Option 2 ID : 264330702050
Option 3 ID : 264330702049
Option 4 ID : 264330702047
Status : Answered
Chosen Option : 1

Q.44 The English novel 'Little Women' was written by which of the following authors?

- Ans
- 1. George Eliot
 - 2. Herman Melville
 - 3. Louisa May Alcott
 - 4. Anthony Trollope

Question ID : 26433055370
Option 1 ID : 264330216464
Option 2 ID : 264330216465
Option 3 ID : 264330216466
Option 4 ID : 264330216467
Status : Not Answered
Chosen Option : --

Q.45 After independence, the 1st national games were hosted by which of the following cities?

- Ans
- 1. Delhi
 - 2. Kolkata
 - 3. Bombay
 - 4. Lucknow

Question ID : 264330176924
Option 1 ID : 264330693893
Option 2 ID : 264330693894
Option 3 ID : 264330693892
Option 4 ID : 264330693891
Status : Answered
Chosen Option : 1

Q.46 How many seats are reserved for scheduled castes in Lok Sabha?

- Ans
- 1. 86
 - 2. 82
 - 3. 84
 - 4. 85

Question ID : 264330168206
Option 1 ID : 264330659702
Option 2 ID : 264330659699
Option 3 ID : 264330659700
Option 4 ID : 264330659701
Status : Not Answered
Chosen Option : --

Q.47 In food processing, which miscellaneous constituent obtained from the maize plant is mixed with water or juice and boiled to form fillings and give products a glossy semi-clear finish?

- Ans
- 1. Cornstarch
 - 2. Acacia
 - 3. Gelatin
 - 4. Algin

Question ID : 264330114604
Option 1 ID : 264330450504
Option 2 ID : 264330450503
Option 3 ID : 264330450501
Option 4 ID : 264330450502
Status : Not Answered
Chosen Option : --

Q.48 भारत के संविधान का निम्नलिखित में से कौन-सा अनुच्छेद, राज्य की कार्यकारी शक्तियों की सीमा के विषय में उल्लेख करता है?

- Ans
- 1. अनुच्छेद 168
 - 2. अनुच्छेद 177
 - 3. अनुच्छेद 165
 - 4. अनुच्छेद 162

Question ID : 26433086829
Option 1 ID : 264330340959
Option 2 ID : 264330340960
Option 3 ID : 264330340958
Option 4 ID : 264330340957
Status : Answered
Chosen Option : 1

Q.49 Who among the following founded an organisation called the Indian Association, in 1876, along with Surendranath Banerjee?

- Ans
- 1. Benoy Krishna Bose
 - 2. Jatindranath Mukherjee
 - 3. Ananda Mohan Bose
 - 4. Chittaranjan Das

Question ID : 264330117809
Option 1 ID : 264330463053
Option 2 ID : 264330463052
Option 3 ID : 264330463051
Option 4 ID : 264330463054
Status : Answered
Chosen Option : 4

Q.50 Which State won the 11th Junior National Men's Hockey Championship?

- Ans
- 1. Uttar Pradesh
 - 2. Madhya Pradesh
 - 3. Rajasthan
 - 4. Haryana

Question ID : 264330113746
Option 1 ID : 264330447069
Option 2 ID : 264330447072
Option 3 ID : 264330447071
Option 4 ID : 264330447070
Status : Answered
Chosen Option : 1

Section : Reasoning

Q.1 Which of the following terms will replace the question mark (?) in the given series?
WIP, ULN, SOL, ?, OUH

- Ans
- 1. RRK
 - 2. QSK
 - 3. QRJ
 - 4. RSJ

Question ID : 264330102180
Option 1 ID : 264330401186
Option 2 ID : 264330401187
Option 3 ID : 264330401185
Option 4 ID : 264330401188
Status : Answered
Chosen Option : 3

Q.2 A, B, C, D, E, F and G were sitting in a straight row, facing north. G was second to the left of A. Only C was to the right of F. A was exactly between B and D. E was to the immediate left of F. Who among the following was at the extreme left end of the row?

- Ans
- 1. D
 - 2. B
 - 3. G
 - 4. E

Question ID : 26433087020
Option 1 ID : 264330341722
Option 2 ID : 264330341721
Option 3 ID : 264330341723
Option 4 ID : 264330341724
Status : Answered
Chosen Option : 3

Q.3 Select the set in which the numbers are related in the same way as are the numbers of the following sets.

(NOTE: Operations should be performed on the whole numbers, without breaking down the numbers into its constituent digits. E.g. 13 – Operations on 13 such as adding/deleting/multiplying etc. to 13 can be performed. Breaking down 13 into 1 and 3 and then performing mathematical operations on 1 and 3 is not allowed)
(16, 40, 5), (3, 27, 18)

- Ans
- 1. (8, 29, 7)
 - 2. (9, 27, 6)
 - 3. (7, 26, 8)
 - 4. (9, 35, 6)

Question ID : 26433097172
Option 1 ID : 264330381387
Option 2 ID : 264330381385
Option 3 ID : 264330381386
Option 4 ID : 264330381388
Status : Answered
Chosen Option : 2

Q.4 In a certain code language, 'FOOD' is coded as 'HMQB' and 'EDGE' is coded as 'GBIC'.
How will 'MEAT' be coded in the same language?

- Ans
- 1. OCDS
 - 2. PCCR
 - 3. PDCR
 - 4. OCCR

Question ID : 264330102193

Option 1 ID : 264330401239

Option 2 ID : 264330401238

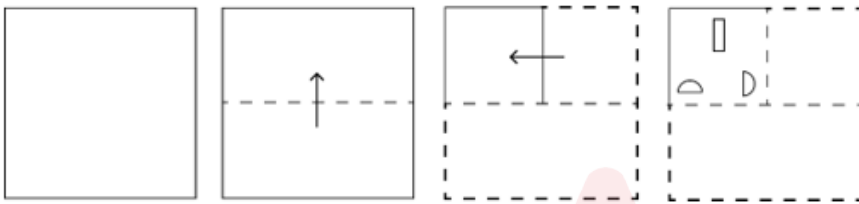
Option 3 ID : 264330401237

Option 4 ID : 264330401240

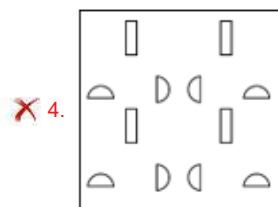
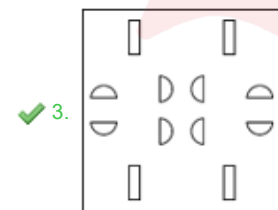
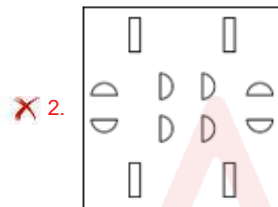
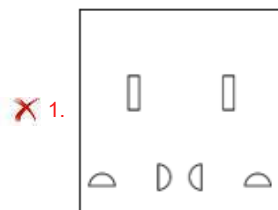
Status : Answered

Chosen Option : 4

Q.5 A square sheet of paper is folded along the dotted line successively along the directions shown and is then punched in the last. How would the paper look when unfolded?



Ans



Question ID : 264330172423

Option 1 ID : 264330676244

Option 2 ID : 264330676243

Option 3 ID : 264330676245

Option 4 ID : 264330676246

Status : Answered

Chosen Option : 3

Q.6 Select the word-pair that best represents a similar relationship to the one expressed in the pair of words given below.
(The words must be considered as meaningful English words and must not be related to each other based on the number of letters/number of consonants/vowels in the word.)

Clarify : Explain

- Ans 1. Raise : Lift
 2. Boring : Exciting
 3. Blow : Air
 4. Mother : Home

Question ID : 26433053233

Option 1 ID : 264330208234

Option 2 ID : 264330208235

Option 3 ID : 264330208236

Option 4 ID : 264330208237

Status : Answered

Chosen Option : 1

Q.7 Which of the following option figures will complete the pattern in the figure given below?



Ans

- 1.
- 2.
- 3.
- 4.

Question ID : 26433080609

Option 1 ID : 264330316369

Option 2 ID : 264330316371

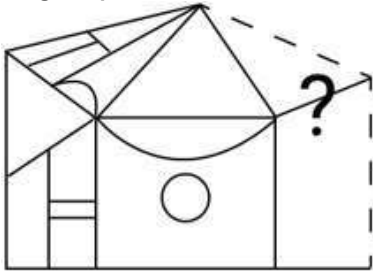
Option 3 ID : 264330316372

Option 4 ID : 264330316370

Status : Answered

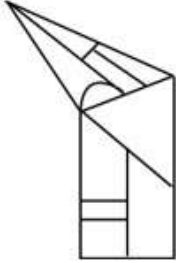
Chosen Option : 4

Q.8 Select the figure from the options that can replace the question mark (?) and complete the given pattern.

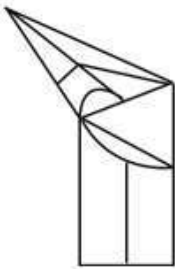


Ans

✓ 1.



✗ 2.



✗ 3.



✗ 4.



Question ID : 264330106466

Option 1 ID : 264330418166

Option 2 ID : 264330418167

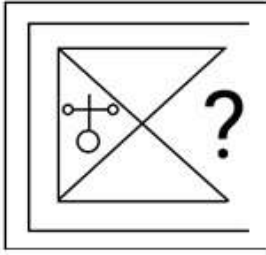
Option 3 ID : 264330418168

Option 4 ID : 264330418165

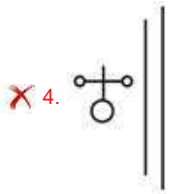
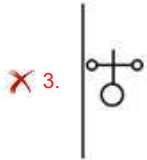
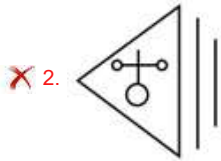
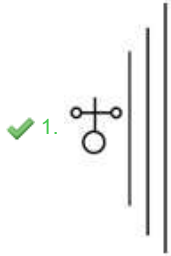
Status : Answered

Chosen Option : 1

Q.9 Select the figure from the given options that will replace the question mark (?) in the figure given below to complete the pattern.



Ans



Question ID : 264330118117

Option 1 ID : 264330464285

Option 2 ID : 264330464286

Option 3 ID : 264330464283

Option 4 ID : 264330464284

Status : Answered

Chosen Option : 1

Q.10 Which figure should replace the question mark (?) in the following series to continue the pattern?

G	V	☆	9	
△ ☆	☆ ↑	↑ V	V 3	?
↑	△	3	↑	

Ans

✓ 1.

V		
3	9	
		□

✗ 2.

3		
9	V	
		□

✗ 3.

↑		
9	□	
		V

✗ 4.

↑		
3	V	
		9

Question ID : 264330129634

Option 1 ID : 264330507904

Option 2 ID : 264330507905

Option 3 ID : 264330507902

Option 4 ID : 264330507903

Status : Answered

Chosen Option : 1

Q.11 Six letters, L, M, N, O, P and Q are written on different faces of a dice. Three positions of this dice are shown here. Find the letter on the face opposite M.



- Ans
- 1. Q
 - 2. L
 - 3. O
 - 4. P

Question ID : 264330106394

Option 1 ID : 264330417880

Option 2 ID : 264330417877

Option 3 ID : 264330417879

Option 4 ID : 264330417878

Status : Answered

Chosen Option : 4



Q.12 Which figure should replace the question mark (?) in the following series to continue the pattern?

D O U X	T A O 3	X T 3 D	U A T R	?
3 A R T	X R U D	R A O U	D O 3 X	

Ans

✓ 1.

D U R X
O A T 3

✗ 2.

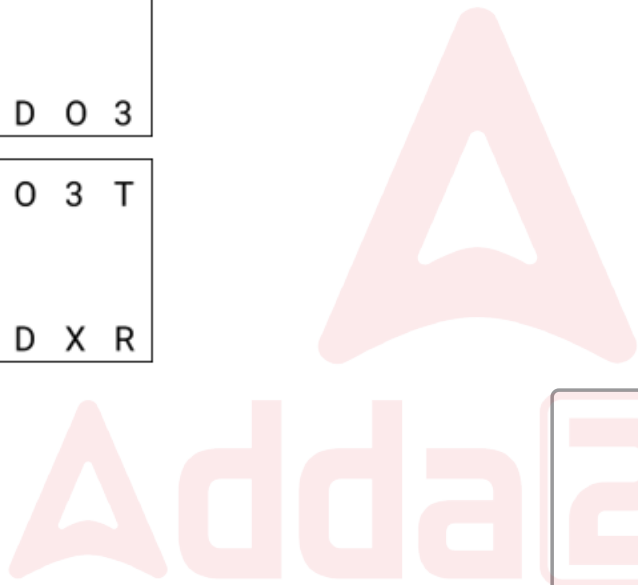
D O A U
X 3 T R

✗ 3.

R U A T
X D O 3

✗ 4.

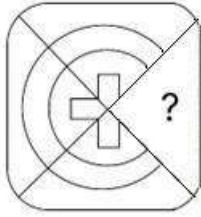
A O 3 T
U D X R



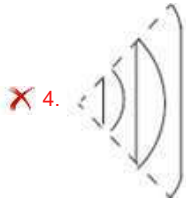
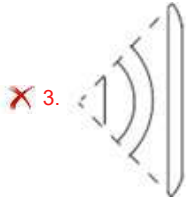
Question ID : 264330129610 Option 1 ID : 264330507807 Option 2 ID : 264330507808 Option 3 ID : 264330507806 Option 4 ID : 264330507809 Status : Answered Chosen Option : 3
--

Q.13

Select the option figure that will replace the question mark (?) in the figure given below to complete the pattern.



Ans



Question ID : 264330117033

Option 1 ID : 264330460214

Option 2 ID : 264330460213

Option 3 ID : 264330460216

Option 4 ID : 264330460215

Status : Answered

Chosen Option : 2

Q.14 Select the correct combination of mathematical signs that can sequentially replace the

* signs and balance the given expression.

$23 * 9 * 13 * 96 * 2 * 92$

Ans 1. $\times, +, -, +, =$

2. $+, +, \times, -, =$

3. $+, -, \times, +, =$

4. $+, \times, -, +, =$

Question ID : 26433074785

Option 1 ID : 264330293229

Option 2 ID : 264330293228

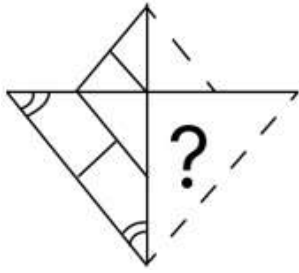
Option 3 ID : 264330293231

Option 4 ID : 264330293230

Status : Answered

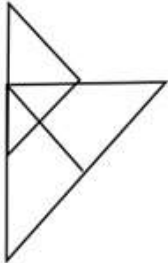
Chosen Option : 4

Q.15 Select the figure from the options that can replace the question mark (?) and complete the given pattern.

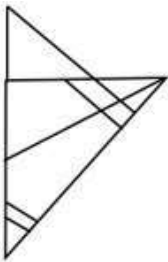


Ans

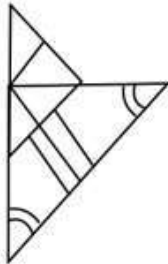
✗ 1.



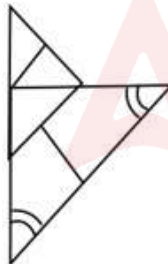
✗ 2.



✗ 3.



✓ 4.



Question ID : 264330106482

Option 1 ID : 264330418230

Option 2 ID : 264330418231

Option 3 ID : 264330418229

Option 4 ID : 264330418232

Status : Answered

Chosen Option : 4

Q.16 Select the correct mirror image of the given figure when the mirror is placed at PQ as shown below.

^\$@#FFAERG |
P
Q

Ans

- ✓ 1. ^\$@#FFAERG
- ✗ 2. ^\$@#FFAREG
- ✗ 3. ^\$@#FFAERG
- ✗ 4. ^\$@#FFAERG

Question ID : 26433082024
Option 1 ID : 264330321931
Option 2 ID : 264330321930
Option 3 ID : 264330321932
Option 4 ID : 264330321929
Status : Answered
Chosen Option : 1

Q.17 Which of the following options will replace the question mark (?) in the given series?
109, 101, 93, 85, 77, ?

- Ans
- ✗ 1. 52
 - ✗ 2. 61
 - ✓ 3. 69
 - ✗ 4. 58

Question ID : 264330109429
Option 1 ID : 264330429995
Option 2 ID : 264330429994
Option 3 ID : 264330429993
Option 4 ID : 264330429996
Status : Answered
Chosen Option : 3

Q.18 Select the option that is related to the third term in the same way as the second term is related to the first term and the sixth term is related to the fifth term.
4 : 125 :: 9 : ? :: 11 : 1728

- Ans
- ✗ 1. 999
 - ✗ 2. 512
 - ✓ 3. 1000
 - ✗ 4. 729

Question ID : 264330101050
Option 1 ID : 264330396748
Option 2 ID : 264330396745
Option 3 ID : 264330396747
Option 4 ID : 264330396746
Status : Answered
Chosen Option : 3

Q.19 Two statements are given, followed by two conclusions numbered I and II. Assuming the statements to be true, even if they seem to be at variance with commonly known facts, decide which of the conclusions logically follow(s) from the statements.

Statements:

All computers are machines.

Some computers are robots.

Conclusions:

I. All robots are computers.

II. Some machines are robots.

- Ans**
- 1. Only Conclusion I follows.
 - 2. Only Conclusion II follows.
 - 3. Both Conclusions I and II follow.
 - 4. Neither Conclusion I nor II follows.

Question ID : 26433081680

Option 1 ID : 264330320553

Option 2 ID : 264330320554

Option 3 ID : 264330320555

Option 4 ID : 264330320556

Status : Answered

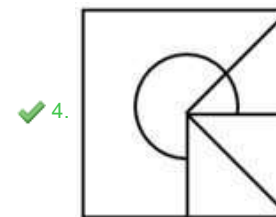
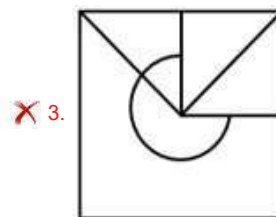
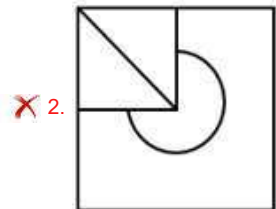
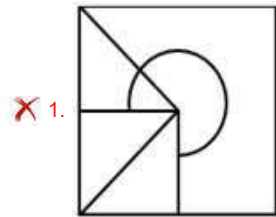
Chosen Option : 4



Q.20 Select the option in which the given figure is embedded (rotation is NOT allowed).



Ans



Question ID : 264330106331

Option 1 ID : 264330417627

Option 2 ID : 264330417625

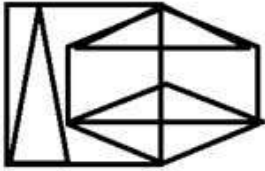
Option 3 ID : 264330417628

Option 4 ID : 264330417626

Status : Answered

Chosen Option : 4

Q.21 How many triangles are there in the given figure?



- Ans
- 1. 12
 - 2. 10
 - 3. 11
 - 4. 13

Question ID : 26433085409

Option 1 ID : 264330335338

Option 2 ID : 264330335340

Option 3 ID : 264330335339

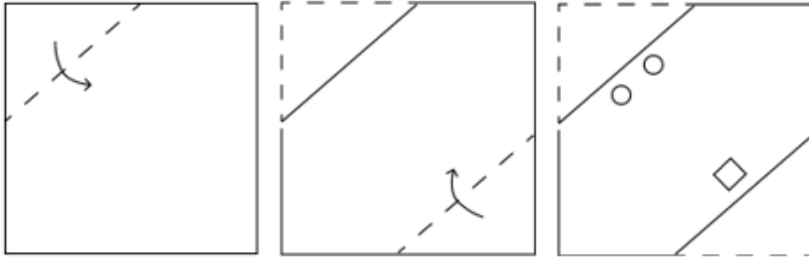
Option 4 ID : 264330335337

Status : Answered

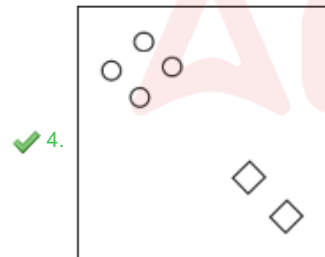
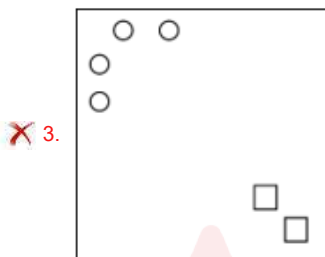
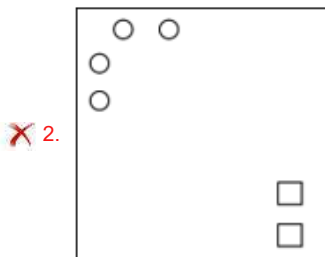
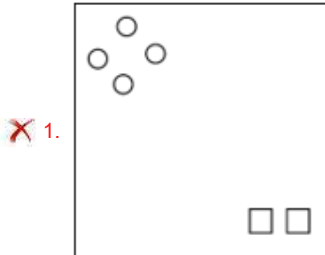
Chosen Option : 4



Q.22 A square sheet of paper is folded along the dotted line successively along the directions shown and is then punched in the last. How would the paper look when unfolded?



Ans



Question ID : 264330172411

Option 1 ID : 264330676196

Option 2 ID : 264330676197

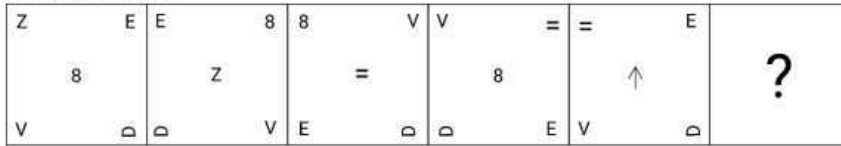
Option 3 ID : 264330676195

Option 4 ID : 264330676198

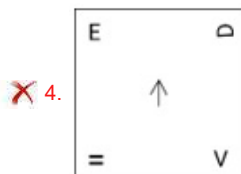
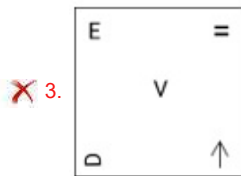
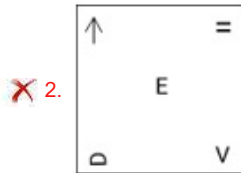
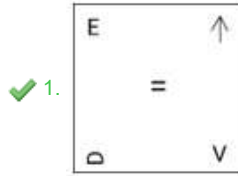
Status : Answered

Chosen Option : 4

Q.23 Which figure should replace the question mark (?) if the following series were to be continued?



Ans



Question ID : 264330103861

Option 1 ID : 264330407747

Option 2 ID : 264330407748

Option 3 ID : 264330407745

Option 4 ID : 264330407746

Status : Answered

Chosen Option : 3

Q.24 Which two signs should be interchanged to make the given equation correct?

$$87 + 85 - 25 \times 3 \div 291 = 3$$

Ans ✗ 1. + and +

✗ 2. + and -

✓ 3. = and ÷

✗ 4. - and ×

Question ID : 26433090218

Option 1 ID : 264330354352

Option 2 ID : 264330354349

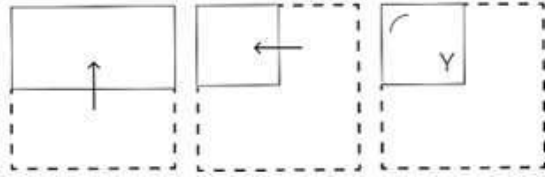
Option 3 ID : 264330354350

Option 4 ID : 264330354351

Status : Answered

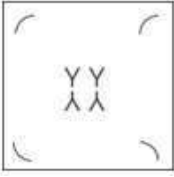
Chosen Option : 3

Q.25 A paper is folded and cut as shown below. How will it appear when unfolded?

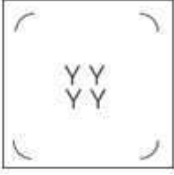


Ans

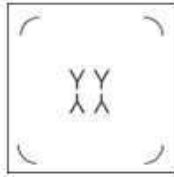
1.



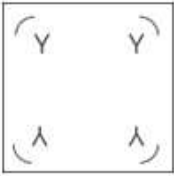
2.



3.



4.



Question ID : 264330114715

Option 1 ID : 264330450947

Option 2 ID : 264330450946

Option 3 ID : 264330450948

Option 4 ID : 264330450945

Status : Answered

Chosen Option : 3

Section : Numerical Ability

Q.1 If the breadth of the rectangle is decreased by 40% and its length is increased by 25%, find the percentage change in its area.

Ans 1. 5% increase

2. 90% decrease

3. 75% decrease

4. 25% decrease

Question ID : 264330104233

Option 1 ID : 264330409234

Option 2 ID : 264330409233

Option 3 ID : 264330409236

Option 4 ID : 264330409235

Status : Answered

Chosen Option : 4

Q.2 When 24 is subtracted from a number, it reduces to 60%. The two-fifth of that number is:

- Ans
- 1. 48
 - 2. 36
 - 3. 24
 - 4. 60

Question ID : 26433097577
Option 1 ID : 264330382980
Option 2 ID : 264330382979
Option 3 ID : 264330382977
Option 4 ID : 264330382978
Status : Answered
Chosen Option : 4

Q.3 A bus is moving at a speed of $40 \frac{\text{km}}{\text{h}}$ and is ahead of a car, which is moving at a speed of $75 \frac{\text{km}}{\text{h}}$. What is the distance (in km) between the bus and the car, if it takes 15 minutes for the car to catch up with the bus?

- Ans
- 1. 8.75
 - 2. 8.54
 - 3. 5.87
 - 4. 9.12

Question ID : 264330119350
Option 1 ID : 264330467689
Option 2 ID : 264330467688
Option 3 ID : 264330467687
Option 4 ID : 264330467690
Status : Answered
Chosen Option : 1

Q.4 Simplify the following.

$$2 - \frac{1}{5 + \frac{1}{6 - \frac{2}{5}}}$$

- Ans
- 1. $\frac{165}{325}$
 - 2. $\frac{262}{145}$
 - 3. $\frac{145}{262}$
 - 4. $\frac{51}{28}$

Question ID : 264330104227
Option 1 ID : 264330409209
Option 2 ID : 264330409210
Option 3 ID : 264330409211
Option 4 ID : 264330409212
Status : Answered
Chosen Option : 3

Q.5 A machine was offered a 16% trade discount on the marked price of ₹30,000. After some cash discount, the machine was sold for ₹23,184. The cash discount is:

- Ans
- 1. 10%
 - 2. 9%
 - 3. 6%
 - 4. 8%

Question ID : 264330183854
Option 1 ID : 264330721092
Option 2 ID : 264330721093
Option 3 ID : 264330721094
Option 4 ID : 264330721095
Status : Answered
Chosen Option : 4

Q.6 A camp has provisions for 60 persons for 18 days. In how many days will the same provisions finish off if the strength of the camp is increased to 90 persons?

- Ans
- 1. 12 days
 - 2. 18 days
 - 3. 8 days
 - 4. 15 days

Question ID : 264330182578
Option 1 ID : 264330716104
Option 2 ID : 264330716106
Option 3 ID : 264330716103
Option 4 ID : 264330716105
Status : Answered
Chosen Option : 1

Q.7 The average marks of three classes of 50, 65 and 45 students, respectively, are 75, 80 and 90. Find the average marks of all the students.

- Ans
- 1. 91.65
 - 2. 81.25
 - 3. 75.81
 - 4. 71.65

Question ID : 264330130063
Option 1 ID : 264330509486
Option 2 ID : 264330509484
Option 3 ID : 264330509485
Option 4 ID : 264330509483
Status : Answered
Chosen Option : 2

Q.8 A device is available for ₹8,000 cash or ₹500 down payment followed by four equal monthly instalments. If the rate of simple interest charged is 25% per annum, then find the instalment, to the nearest rupee.

- Ans
- 1. ₹1,977
 - 2. ₹1,987
 - 3. ₹1,970
 - 4. ₹1,790

Question ID : 264330118087
Option 1 ID : 264330464165
Option 2 ID : 264330464166
Option 3 ID : 264330464164
Option 4 ID : 264330464163
Status : Not Answered
Chosen Option : --

Q.9 Which of the following numbers is NOT a prime number?

- Ans
- 1. 1571
 - 2. 1471
 - 3. 1271
 - 4. 1171

Question ID : 264330109233
Option 1 ID : 264330429212
Option 2 ID : 264330429211
Option 3 ID : 264330429210
Option 4 ID : 264330429209
Status : Answered
Chosen Option : 3

Q.10 The cost price of an item is one-fourth of its selling price. What is the gain or loss percentage on that item?

- Ans
- 1. Gain of 300%
 - 2. Loss of 100%
 - 3. Gain of 100%
 - 4. Loss of 300%

Question ID : 264330103471
Option 1 ID : 264330406192
Option 2 ID : 264330406189
Option 3 ID : 264330406190
Option 4 ID : 264330406191
Status : Answered
Chosen Option : 1

Q.11 The sum of five consecutive integers is 235. Which of the five integers is prime?

- Ans
- 1. 47
 - 2. 51
 - 3. 43
 - 4. 53

Question ID : 264330104411
Option 1 ID : 264330409946
Option 2 ID : 264330409947
Option 3 ID : 264330409945
Option 4 ID : 264330409948
Status : Answered
Chosen Option : 1

Q.12 The ratio of the number of boys to that of the girls in a school is 5 : 7. If there are 1148 girls in the school, how many boys are there in that school?

- Ans
- 1. 830
 - 2. 840
 - 3. 820
 - 4. 810

Question ID : 264330131164
Option 1 ID : 264330513769
Option 2 ID : 264330513767
Option 3 ID : 264330513768
Option 4 ID : 264330513770
Status : Answered
Chosen Option : 3

Q.13 The internal radius of a metallic pipe is 2 cm and its external radius is 2.7 cm. If the length of the pipe is 10 cm, then find the volume of the metal used for this pipe.

(Use $\pi = \frac{22}{7}$)

- Ans
- 1. 110.5 cm³
 - 2. 101.2 cm³
 - 3. 93.4 cm³
 - 4. 103.4 cm³

Question ID : 264330118112
Option 1 ID : 264330464266
Option 2 ID : 264330464263
Option 3 ID : 264330464265
Option 4 ID : 264330464264
Status : Answered
Chosen Option : 4

Q.14 A sum of ₹32,760 was taken as a loan. This is to be paid in three equal annual instalments. If the rate of interest is 20% compounded annually, then the value of each instalment is:

- Ans
- 1. ₹11,000
 - 2. ₹10,000
 - 3. ₹15,552
 - 4. ₹16,552

Question ID : 264330109257
Option 1 ID : 264330429305
Option 2 ID : 264330429307
Option 3 ID : 264330429308
Option 4 ID : 264330429306
Status : Answered
Chosen Option : 3

Q.15 If 27 identical small spheres are made out of a big sphere of diameter 6 cm, what is the radius (in cm) of the small sphere?

- Ans 1. 1
 2. 2
 3. 1.5
 4. 0.5

Question ID : 264330109353
Option 1 ID : 264330429690
Option 2 ID : 264330429692
Option 3 ID : 264330429691
Option 4 ID : 264330429689
Status : Answered
Chosen Option : 1

Section : Computer Proficiency

Q.1 Which of the following components is responsible for translating domain names (e.g., www.example.com) into IP addresses (e.g. 192.168.1.1) to enable communication over the internet?

- Ans 1. Firewall
 2. Modem
 3. DNS Server
 4. Router

Question ID : 264330173297
Option 1 ID : 264330679670
Option 2 ID : 264330679668
Option 3 ID : 264330679669
Option 4 ID : 264330679667
Status : Answered
Chosen Option : 3

Q.2 Which of the following shortcut keys is used to get context sensitive Help in MS Word 365?

- Ans 1. Press F6
 2. Press F10
 3. Press F1
 4. Press F7

Question ID : 264330176728
Option 1 ID : 264330693128
Option 2 ID : 264330693129
Option 3 ID : 264330693127
Option 4 ID : 264330693130
Status : Answered
Chosen Option : 3

Q.3 In Microsoft Word 2019, which of the following settings is NOT found in the 'Indents and Spacing' tab of the 'Paragraph' dialog box?

- Ans
- 1. General
 - 2. Indentation
 - 3. Spacing
 - 4. Pagination

Question ID : 264330182754
Option 1 ID : 264330716787
Option 2 ID : 264330716788
Option 3 ID : 264330716790
Option 4 ID : 264330716789
Status : Answered
Chosen Option : 1

Q.4 When editing data in an MS Excel 365 worksheet, which of the following actions will allow you to reverse your recent changes?

- Ans
- 1. Paste
 - 2. Undo
 - 3. Save
 - 4. Copy

Question ID : 264330178568
Option 1 ID : 264330700300
Option 2 ID : 264330700302
Option 3 ID : 264330700301
Option 4 ID : 264330700299
Status : Answered
Chosen Option : 2

Q.5 What is the shortcut command in MS-Word 365 for selecting all the words from the file?

- Ans
- 1. Ctrl + X
 - 2. Ctrl + C
 - 3. Ctrl + A
 - 4. Ctrl + Z

Question ID : 264330171410
Option 1 ID : 264330672255
Option 2 ID : 264330672257
Option 3 ID : 264330672258
Option 4 ID : 264330672256
Status : Answered
Chosen Option : 3

Q.6 Which keyboard shortcut allows you to edit the content of a selected cell directly in the cell itself in Microsoft Excel 365?

- Ans
- 1. Ctrl + E
 - 2. Ctrl + C
 - 3. F12
 - 4. F2

Question ID : 264330180697
Option 1 ID : 264330708755
Option 2 ID : 264330708756
Option 3 ID : 264330708758
Option 4 ID : 264330708757
Status : Answered
Chosen Option : 4

Q.7 Which of the following keyboard shortcut keys is used to pick a new font for the selected text in MS-Word 365?

- Ans
- 1. Ctrl + Alt + F
 - 2. Ctrl + Shift + F
 - 3. Ctrl + F
 - 4. Shift + F

Question ID : 264330178287
Option 1 ID : 264330699206
Option 2 ID : 264330699203
Option 3 ID : 264330699204
Option 4 ID : 264330699205
Status : Answered
Chosen Option : 2

Q.8 What is the category of software that enables word processing, database management, graphic manipulation and spreadsheet creation?

- Ans
- 1. Structure
 - 2. Application
 - 3. Framework
 - 4. System

Question ID : 264330182763
Option 1 ID : 264330716826
Option 2 ID : 264330716824
Option 3 ID : 264330716825
Option 4 ID : 264330716823
Status : Answered
Chosen Option : 2

Q.9 Which social networking platform is known for its character limit on posts and real-time updates?

- Ans**
- 1. Facebook
 - 2. LinkedIn
 - 3. Instagram
 - 4. Twitter

Question ID : 264330174463
Option 1 ID : 264330684271
Option 2 ID : 264330684273
Option 3 ID : 264330684274
Option 4 ID : 264330684272
Status : Answered
Chosen Option : 4

Q.10 In MS Excel 365, What is the main purpose of using a chart in MS Excel?

- Ans**
- 1. To format text
 - 2. To perform calculations
 - 3. To store data
 - 4. To visually represent data

Question ID : 264330182122
Option 1 ID : 264330714330
Option 2 ID : 264330714328
Option 3 ID : 264330714327
Option 4 ID : 264330714329
Status : Answered
Chosen Option : 4

Constable Executive Male and Female in Delhi Police Examination 2023

Roll Number	
Candidate Name	
Venue Name	iON Digital Zone iDZ Unn
Exam Date	20/11/2023
Exam Time	12:00 PM - 1:30 PM
Subject	Constable Executive Male and Female in Delhi Police Examination 2023

Section : General Knowledge

Q.1 The Rourkela Steel Plant was developed with the collaboration of _____.

- Ans 1. France
 2. Germany
 3. Japan
 4. Britain

Question ID : 264330181241
Option 1 ID : 264330710890
Option 2 ID : 264330710888
Option 3 ID : 264330710887
Option 4 ID : 264330710889
Status : Answered
Chosen Option : 1

Q.2 The measurement of a kho-kho field must be _____.

- Ans 1. 28×15 m
 2. 29×16 m
 3. 30×15 m
 4. 27×16 m

Question ID : 264330110395
Option 1 ID : 264330433858
Option 2 ID : 264330433857
Option 3 ID : 264330433859
Option 4 ID : 264330433860
Status : Answered
Chosen Option : 1

Q.3 Who was the Minister of Finance when the economic reforms of 1991 took place in India?

- Ans 1. Mr. Bimal Jalan
 2. Mr. P Chidambaram
 3. Mr. Pranab Mukherjee
 4. Dr. Manmohan Singh

Question ID : 264330109119
Option 1 ID : 264330428756
Option 2 ID : 264330428754
Option 3 ID : 264330428755
Option 4 ID : 264330428753
Status : Answered
Chosen Option : 4

Q.4 Kavadi Aattam is a major folk dance form of which of the following states of India?

- Ans 1. Tamil Nadu
 2. Kerala
 3. Sikkim
 4. Karnataka

Question ID : 264330111791
Option 1 ID : 264330439250
Option 2 ID : 264330439249
Option 3 ID : 264330439252
Option 4 ID : 264330439251
Status : Answered
Chosen Option : 2

Q.5 Which of the following nations won the third blind cricket World Cup T20 championship?

- Ans 1. India
 2. Bangladesh
 3. Pakistan
 4. Sri Lanka

Question ID : 264330176927
Option 1 ID : 264330693904
Option 2 ID : 264330693906
Option 3 ID : 264330693905
Option 4 ID : 264330693903
Status : Answered
Chosen Option : 2

Q.6 During the British era Indian economy was known as _____.

- Ans 1. a source for its raw material
 2. a developed economy
 3. only a market for agricultural products
 4. a source for finished capital goods

Question ID : 264330131567
Option 1 ID : 264330515372
Option 2 ID : 264330515373
Option 3 ID : 264330515374
Option 4 ID : 264330515371
Status : Answered
Chosen Option : 3

Q.7 After which incident did Mahatma Gandhi call off the non-cooperation movement?

- Ans 1. Jallianwala Bagh massacre of 1919
 2. Chauri Chaura killing in 1922
 3. Chauri Chaura killing in 1925
 4. Jallianwala Bagh massacre of 1922

Question ID : 264330120150
Option 1 ID : 264330470856
Option 2 ID : 264330470855
Option 3 ID : 264330470857
Option 4 ID : 264330470858
Status : Answered
Chosen Option : 2

Q.8 Which of the following statements is correct with respect to basketball?

- Ans
- 1. Each team is made up of 11 players, with only 7 allowed on the court at any time.
 - 2. Each team is made up of 12 players, with only 5 allowed on the court at any time.
 - 3. Each team is made up of 11 players, with only 4 allowed on the court at any time.
 - 4. Each team is made up of 12 players, with only 8 allowed on the court at any time.

Question ID : 264330113776
Option 1 ID : 264330447190
Option 2 ID : 264330447192
Option 3 ID : 264330447189
Option 4 ID : 264330447191
Status : Answered
Chosen Option : 1

Q.9 Which of the following statements is INCORRECT regarding the collegium system?

- Ans
- 1. This system started in the year 2007.
 - 2. This system was evolved through Supreme Court judgment.
 - 3. It recommends the appointments and transfers of judges.
 - 4. It consists of Chief Justice and four senior judges of Supreme Court.

Question ID : 264330116387
Option 1 ID : 264330457636
Option 2 ID : 264330457635
Option 3 ID : 264330457634
Option 4 ID : 264330457633
Status : Answered
Chosen Option : 2

Q.10 The Communist Party of India was formed in 1925 at the first Party Conference in _____.

- Ans
- 1. Madras
 - 2. Kanpur
 - 3. Bombay
 - 4. Delhi

Question ID : 264330114411
Option 1 ID : 264330449729
Option 2 ID : 264330449732
Option 3 ID : 264330449730
Option 4 ID : 264330449731
Status : Answered
Chosen Option : 1

Q.11 Which of the tides have variations in height?

- Ans
- 1. Mixed tide
 - 2. Semi diurnal tide
 - 3. Diurnal tide
 - 4. Neap tide

Question ID : 264330118520
Option 1 ID : 264330465484
Option 2 ID : 264330465482
Option 3 ID : 264330465483
Option 4 ID : 264330465481
Status : Answered
Chosen Option : 1

Q.12 Which of the following is considered to be the most liquid asset?

- Ans 1. Gold
 2. Bond
 3. Land
 4. Money

Question ID : 264330110160
Option 1 ID : 264330432917
Option 2 ID : 264330432918
Option 3 ID : 264330432920
Option 4 ID : 264330432919
Status : Answered
Chosen Option : 4

Q.13 The Republic Day parade, in the year 1955, was organised at which of the following places in Delhi?

- Ans 1. Rajghat
 2. Old Fort
 3. Rajpath
 4. Parliament House Street

Question ID : 264330182989
Option 1 ID : 264330717690
Option 2 ID : 264330717688
Option 3 ID : 264330717689
Option 4 ID : 264330717691
Status : Answered
Chosen Option : 3

Q.14 Padma Bhushan awardee Kumari Kamala is an exponent of _____ .

- Ans 1. Odissi
 2. Sattriya
 3. Bharatanatyam
 4. Mohiniyattam

Question ID : 264330111983
Option 1 ID : 264330440018
Option 2 ID : 264330440019
Option 3 ID : 264330440017
Option 4 ID : 264330440020
Status : Answered
Chosen Option : 1

Q.15 The Vithal temple of Hampi has _____ columns that produce musical notes.

- Ans 1. 75
 2. 63
 3. 56
 4. 49

Question ID : 264330106239
Option 1 ID : 264330417259
Option 2 ID : 264330417258
Option 3 ID : 264330417260
Option 4 ID : 264330417257
Status : Not Answered
Chosen Option : --

Q.16 In the year 2022, Arjun Singh Dhurve was conferred the Padma Shri for his contribution to which of the following dance forms?

- Ans
- 1. Bharatanatyam
 - 2. Baiga Tribal Dance
 - 3. Kathak
 - 4. Chhau

Question ID : 264330120413
Option 1 ID : 264330471904
Option 2 ID : 264330471905
Option 3 ID : 264330471903
Option 4 ID : 264330471906
Status : Answered
Chosen Option : 4

Q.17 Which famous Chinese philosopher and scholar emphasised the importance of ethical values, family relationships and social harmony in his teachings?

- Ans
- 1. Confucius
 - 2. Mao Zedong
 - 3. Sun Tzu
 - 4. Laozi

Question ID : 264330179301
Option 1 ID : 264330703207
Option 2 ID : 264330703210
Option 3 ID : 264330703209
Option 4 ID : 264330703208
Status : Answered
Chosen Option : 4

Q.18 Who among the following gave Tansen the title of 'Mian'?

- Ans
- 1. Shah Jahan
 - 2. Akbar
 - 3. Babur
 - 4. Humayun

Question ID : 264330116427
Option 1 ID : 264330457796
Option 2 ID : 264330457795
Option 3 ID : 264330457793
Option 4 ID : 264330457794
Status : Answered
Chosen Option : 2

Q.19 Which of the following writs is issued by a superior court to compel a lower court or a government officer to perform mandatory or purely ministerial duties correctly?

- Ans
- 1. Quo warranto
 - 2. Certiorari
 - 3. Habeas Corpus
 - 4. Mandamus

Question ID : 264330110794
Option 1 ID : 264330435455
Option 2 ID : 264330435454
Option 3 ID : 264330435453
Option 4 ID : 264330435456
Status : Answered
Chosen Option : 4

Q.20 When was the Sampoorna Grameen Rozgar Yojana launched?

- Ans 1. 2000
 2. 2001
 3. 2003
 4. 2002

Question ID : 264330131756
Option 1 ID : 264330516123
Option 2 ID : 264330516124
Option 3 ID : 264330516126
Option 4 ID : 264330516125
Status : Answered
Chosen Option : 4

Q.21 Which of the following is a major inorganic source of food?

- Ans 1. Meat
 2. Water
 3. Grains
 4. Vegetables

Question ID : 264330113324
Option 1 ID : 264330445381
Option 2 ID : 264330445384
Option 3 ID : 264330445383
Option 4 ID : 264330445382
Status : Answered
Chosen Option : 1

Q.22 Which report of the Second Administrative Reforms Commission is related to the recommendations on Panchayati Raj?

- Ans 1. 5th
 2. 4th
 3. 6th
 4. 3rd

Question ID : 264330130473
Option 1 ID : 264330511005
Option 2 ID : 264330511004
Option 3 ID : 264330511006
Option 4 ID : 264330511003
Status : Not Answered
Chosen Option : --

Q.23 Which of the following is/are meant for promoting the ideals of social and economic democracy?

- Ans 1. Single Citizenship
 2. Fundamental Duties
 3. Co-Operative Societies
 4. Directive Principles of State Policy

Question ID : 264330173468
Option 1 ID : 264330680352
Option 2 ID : 264330680354
Option 3 ID : 264330680353
Option 4 ID : 264330680351
Status : Answered
Chosen Option : 4

Q.24 In the mid-eighth century, Dantidurga, a Rashtrakuta chief overthrew his Chalukya overlord and performed a ritual called _____.

- Ans
- 1. Ashvamedha Yajna
 - 2. Rajasuya Yajna
 - 3. Hiranya-GarbhaYajna
 - 4. Deva Yajna

Question ID : 264330182256
Option 1 ID : 264330714847
Option 2 ID : 264330714850
Option 3 ID : 264330714849
Option 4 ID : 264330714848
Status : Answered
Chosen Option : 3

Q.25 On which of the following days is Netaji Subash Chandra Bose's birth anniversary celebrated?

- Ans
- 1. 23 March
 - 2. 14 November
 - 3. 23 January
 - 4. 16 January

Question ID : 264330106210
Option 1 ID : 264330417141
Option 2 ID : 264330417144
Option 3 ID : 264330417142
Option 4 ID : 264330417143
Status : Answered
Chosen Option : 3

Q.26 In which of the following years had Bal Gangadhar Tilak founded the Home League?

- Ans
- 1. 1924
 - 2. 1912
 - 3. 1934
 - 4. 1916

Question ID : 264330118603
Option 1 ID : 264330465664
Option 2 ID : 264330465666
Option 3 ID : 264330465663
Option 4 ID : 264330465665
Status : Answered
Chosen Option : 4

Q.27 The Contingency Fund of India is operated by the _____.

- Ans
- 1. Speaker
 - 2. Finance Minister
 - 3. President
 - 4. Prime Minister

Question ID : 264330110601
Option 1 ID : 264330434684
Option 2 ID : 264330434683
Option 3 ID : 264330434682
Option 4 ID : 264330434681
Status : Answered
Chosen Option : 4

Q.28 Which of the following is NOT a salient feature of liberalisation?

- Ans
- 1. Abolishment of industrial licensing
 - 2. Autonomy to determine the prices
 - 3. Selling part of equity shares of public sector undertakings to public
 - 4. De-reservation of goods for small scale industry

Question ID : 264330111605
Option 1 ID : 264330438506
Option 2 ID : 264330438505
Option 3 ID : 264330438508
Option 4 ID : 264330438507
Status : Answered
Chosen Option : 1

Q.29 Which of the following additions in the Indian Constitution was based on the suggestions of the Swaran Singh Committee?

- Ans
- 1. Emergency Provisions
 - 2. Fundamental Rights
 - 3. Directive Principles of State Policy
 - 4. Fundamental Duties

Question ID : 264330114606
Option 1 ID : 264330450512
Option 2 ID : 264330450510
Option 3 ID : 264330450511
Option 4 ID : 264330450509
Status : Answered
Chosen Option : 4

Q.30 Who among the following had written the 'Kamayani'?

- Ans
- 1. Mahadevi Verma
 - 2. Jaishankar Prasad
 - 3. Sumitranandan Pant
 - 4. Amrita Pritam

Question ID : 26433086913
Option 1 ID : 264330341293
Option 2 ID : 264330341295
Option 3 ID : 264330341296
Option 4 ID : 264330341294
Status : Answered
Chosen Option : 1

Q.31 To grant autonomy to firms, some public sector units were given special status. Which of the following was NOT one of the statuses?

- Ans
- 1. Maharatnas
 - 2. Navratnas
 - 3. Miniratnas
 - 4. Devratnas

Question ID : 264330111619
Option 1 ID : 264330438561
Option 2 ID : 264330438562
Option 3 ID : 264330438563
Option 4 ID : 264330438564
Status : Answered
Chosen Option : 2

Q.32 Which of the following statements about hurricanes is true?

- Ans 1. Related to Western Pacific
 2. Related to Atlantic
 3. Related to Indian ocean
 4. Related to Western Australia

Question ID : 264330131735
Option 1 ID : 264330516040
Option 2 ID : 264330516041
Option 3 ID : 264330516039
Option 4 ID : 264330516042
Status : Answered
Chosen Option : 2

Q.33 Which of the following is the highest peak of Western Ghats?

- Ans 1. Anai Mudi
 2. Doda Betta
 3. Javedi Hills
 4. Mahendra Giri

Question ID : 264330177100
Option 1 ID : 264330694598
Option 2 ID : 264330694597
Option 3 ID : 264330694596
Option 4 ID : 264330694595
Status : Answered
Chosen Option : 1

Q.34 Which of the following claims about abiotic is false?

- Ans 1. Water is an abiotic component of the ecosystem
 2. Abiotic components of the ecosystem were never alive
 3. They are the non-living components of the ecosystem
 4. They are the living components of the ecosystem

Question ID : 264330131728
Option 1 ID : 264330516011
Option 2 ID : 264330516013
Option 3 ID : 264330516012
Option 4 ID : 264330516014
Status : Answered
Chosen Option : 4

Q.35 According to Mughal records, during Akbar's reign, there were 29 Mansabdars with a rank of _____.

- Ans 1. 2,500 zat
 2. 5,000 zat
 3. 7,000 zat
 4. 500 zat

Question ID : 264330106567
Option 1 ID : 264330418571
Option 2 ID : 264330418569
Option 3 ID : 264330418570
Option 4 ID : 264330418572
Status : Answered
Chosen Option : 4

Q.36 Which of the following is an example of the cooperative sector industry?

- Ans
- 1. Steel Authority of India Limited
 - 2. Dabur Industry
 - 3. Coir Industry
 - 4. Bajaj Auto Limited

Question ID : 264330173609
Option 1 ID : 264330680917
Option 2 ID : 264330680918
Option 3 ID : 264330680916
Option 4 ID : 264330680915
Status : Answered
Chosen Option : 1

Q.37 Which of the following was adopted as the 'National Emblem' on 26 January 1950?

- Ans
- 1. Lion capital of Sarnath
 - 2. Single bull capital at Rampurva
 - 3. Single lion capital at Lauriya Nandangarh
 - 4. Single lion capital at Rampurva

Question ID : 264330120482
Option 1 ID : 264330472179
Option 2 ID : 264330472182
Option 3 ID : 264330472181
Option 4 ID : 264330472180
Status : Answered
Chosen Option : 1

Q.38 Pandit S Balleash Bhajantri is a _____ artist.

- Ans
- 1. Sarod
 - 2. Shehnai
 - 3. Sitar
 - 4. Santoor

Question ID : 264330112682
Option 1 ID : 264330442815
Option 2 ID : 264330442814
Option 3 ID : 264330442816
Option 4 ID : 264330442813
Status : Answered
Chosen Option : 3

Q.39 A dispute petition in the election of the President of the India can be filed in:

- Ans
- 1. Both, the Supreme Court of India and the High Court of any state
 - 2. Only the Supreme Court of India
 - 3. Any court within the territory of India
 - 4. Only the Delhi High Court

Question ID : 264330177753
Option 1 ID : 264330697121
Option 2 ID : 264330697119
Option 3 ID : 264330697122
Option 4 ID : 264330697120
Status : Answered
Chosen Option : 2

Q.40 Which of these dances is commonly performed in Odisha?

- Ans
- 1. Grida dance
 - 2. Raas Leela
 - 3. Ghumura
 - 4. Chakyar Koothu

Question ID : 264330109282
Option 1 ID : 264330429405
Option 2 ID : 264330429408
Option 3 ID : 264330429407
Option 4 ID : 264330429406
Status : Answered
Chosen Option : 4

Q.41 Which method was used for making bronze statues during Harrapan Civilisation?

- Ans
- 1. Lost wax casting
 - 2. Ivory carving
 - 3. Stone carving
 - 4. Wood carving

Question ID : 264330109316
Option 1 ID : 264330429542
Option 2 ID : 264330429544
Option 3 ID : 264330429541
Option 4 ID : 264330429543
Status : Answered
Chosen Option : 3

Q.42 Who inaugurated the 36th National Games, which were held in the year 2022?

- Ans
- 1. Narendra Modi
 - 2. Kiren Rijju
 - 3. Nisith Pramanik
 - 4. Anurag Thakur

Question ID : 264330113731
Option 1 ID : 264330447011
Option 2 ID : 264330447010
Option 3 ID : 264330447012
Option 4 ID : 264330447009
Status : Answered
Chosen Option : 4

Q.43 The Congress and the Muslim League signed the historic _____ in 1916.

- Ans
- 1. Lahore Pact
 - 2. Surat Pact
 - 3. Delhi Pact
 - 4. Lucknow Pact

Question ID : 264330114101
Option 1 ID : 264330448490
Option 2 ID : 264330448492
Option 3 ID : 264330448489
Option 4 ID : 264330448491
Status : Answered
Chosen Option : 4

Q.44 'My Country My life', is the autobiography of which of the following ex-Deputy Prime Minister of India?

- Ans
- 1. Vallabh Bhai Patel
 - 2. Jagjivan Ram
 - 3. Lal Krishna Advani
 - 4. Morarji Desai

Question ID : 264330112864
Option 1 ID : 264330443542
Option 2 ID : 264330443541
Option 3 ID : 264330443544
Option 4 ID : 264330443543
Status : Answered
Chosen Option : 4

Q.45 The value of final goods and services produced in a country is known as _____ .

- Ans
- 1. national income
 - 2. national productivity
 - 3. per capita income
 - 4. distribution of income

Question ID : 264330120877
Option 1 ID : 264330473723
Option 2 ID : 264330473724
Option 3 ID : 264330473726
Option 4 ID : 264330473725
Status : Answered
Chosen Option : 1

Q.46 How many openings does the digestive system in Platyhelminthes have?

- Ans
- 1. Single
 - 2. Indefinite
 - 3. Triple
 - 4. Double

Question ID : 264330113316
Option 1 ID : 264330445349
Option 2 ID : 264330445352
Option 3 ID : 264330445351
Option 4 ID : 264330445350
Status : Answered
Chosen Option : 4

Q.47 प्रारंभिक वैदिक समाज में, परिवार के मुखिया को किस नाम से जाना जाता था?

- Ans
- 1. ग्रामणी
 - 2. ब्रजपति
 - 3. पुरोहित
 - 4. कुलपा

Question ID : 264330120417
Option 1 ID : 264330471920
Option 2 ID : 264330471921
Option 3 ID : 264330471922
Option 4 ID : 264330471919
Status : Answered
Chosen Option : 3

Q.48 Which physicist is known for extensive research in 'radiation phenomena' and the discovery of polonium and radium?

- Ans
- 1. Lise Meitner
 - 2. Rosalind Franklin
 - 3. Helen Quinn
 - 4. Marie Curie

Question ID : 264330141660
Option 1 ID : 264330554962
Option 2 ID : 264330554959
Option 3 ID : 264330554960
Option 4 ID : 264330554961
Status : Answered
Chosen Option : 2

Q.49 Which organisation releases the official poverty estimates in India based on data collected from the National Sample Survey Office (NSSO) and other sources?

- Ans
- 1. World Bank
 - 2. NITI Aayog
 - 3. Reserve Bank of India
 - 4. Ministry of Finance

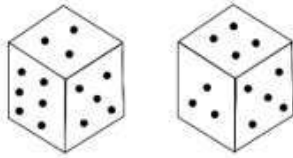
Question ID : 264330183043
Option 1 ID : 264330717904
Option 2 ID : 264330717907
Option 3 ID : 264330717905
Option 4 ID : 264330717906
Status : Answered
Chosen Option : 2

Q.50 Which of the following plans was introduced in the year 1945, before planned economic development began in India?

- Ans
- 1. The Gandhian Plan
 - 2. The People's Plan
 - 3. The Sarvodaya Plan
 - 4. The Bombay Plan

Question ID : 264330111750
Option 1 ID : 264330439086
Option 2 ID : 264330439087
Option 3 ID : 264330439088
Option 4 ID : 264330439085
Status : Answered
Chosen Option : 3

Q.1 Observe the dots on a dice (one to six dots) in the following figures. How many dots are contained on the face opposite to that containing four dots?



- Ans
- 1. Two
 - 2. One
 - 3. Three
 - 4. Six

Question ID : 264330113646
Option 1 ID : 264330446670
Option 2 ID : 264330446669
Option 3 ID : 264330446672
Option 4 ID : 264330446671
Status : Answered
Chosen Option : 4

Q.2 Select the option that represents the letters that, when sequentially placed from left to right in the blanks below, will complete the letter series.

C _ E _ T _ W _ R T C W _ R _ C W E _ _

- Ans
- 1. WRCEETRT
 - 2. WRCERTRT
 - 3. WRCERERT
 - 4. WRCETERT

Question ID : 26433092542
Option 1 ID : 264330363460
Option 2 ID : 264330363459
Option 3 ID : 264330363458
Option 4 ID : 264330363457
Status : Answered
Chosen Option : 1

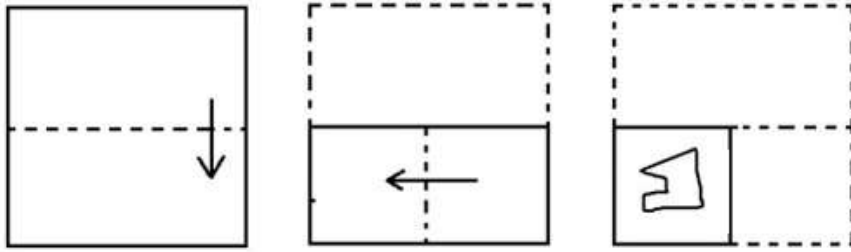
Q.3 Which two signs should be interchanged to make the following equation correct?

$$14 \times 2 \div 9 - 5 + 18 = 76$$

- Ans
- 1. ÷ and ×
 - 2. + and +
 - 3. - and +
 - 4. - and ×

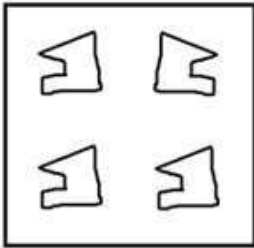
Question ID : 264330101089
Option 1 ID : 264330396904
Option 2 ID : 264330396901
Option 3 ID : 264330396902
Option 4 ID : 264330396903
Status : Answered
Chosen Option : 1

Q.4 The sequence of folding a piece of paper and the manner in which the folded paper has been cut is shown below. Choose a figure which would most closely resemble the unfolded form of the paper.

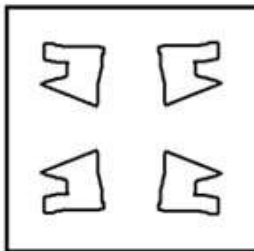


Ans

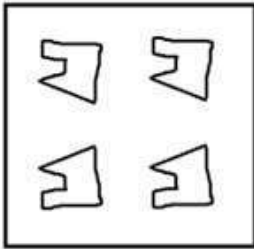
✗ 1.



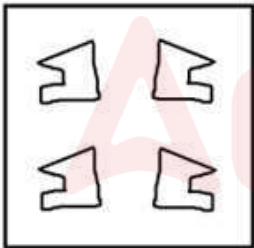
✓ 2.



✗ 3.



✗ 4.



Question ID : 264330112318

Option 1 ID : 264330441357

Option 2 ID : 264330441359

Option 3 ID : 264330441360

Option 4 ID : 264330441358

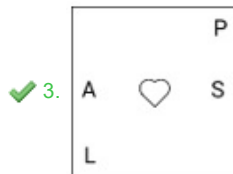
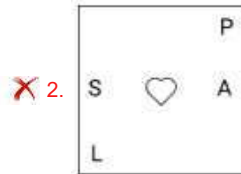
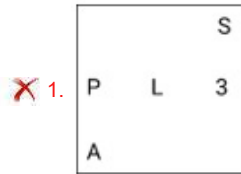
Status : Answered

Chosen Option : 2

Q.5 Which figure should replace the question mark (?) if the following series were to be continued?

	3		C		P		3		A	
P	□	C	3	L	A	A	C	3	P	S
A		P		L		A		S		?

Ans



Question ID : 264330103890

Option 1 ID : 264330407862

Option 2 ID : 264330407863

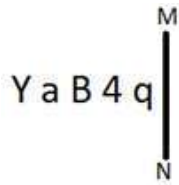
Option 3 ID : 264330407864

Option 4 ID : 264330407861

Status : Answered

Chosen Option : 3

Q.6 Select the correct mirror image of the given figure when the mirror is placed at MN as shown below.



Ans

- 1. b 4 B a Y
- 2. p 4 B 9 1
- 3. 1 4 B a Y
- 4. p 4 B 9 Y

Question ID : 264330166654

Option 1 ID : 264330653655

Option 2 ID : 264330653657

Option 3 ID : 264330653658

Option 4 ID : 264330653656

Status : Answered

Chosen Option : 4

Q.7 Six friends Farheen, Pooja, Richa, Sonika, Vani and Tanya are sitting around a circular table facing the centre. Farheen is an immediate neighbour of both Pooja and Richa. Sonika is sitting second to the right of Pooja. Vani is sitting third to the left of Richa. Tanya is an immediate neighbour of both Sonika and Richa. Who sits to the immediate left of Tanya?

- Ans
- 1. Richa
 - 2. Pooja
 - 3. Farheen
 - 4. Sonika

Question ID : 26433082283

Option 1 ID : 264330322966

Option 2 ID : 264330322968

Option 3 ID : 264330322967

Option 4 ID : 264330322965

Status : Answered

Chosen Option : 4

Q.8 Select the option that is related to the fourth number in the same way as the first number is related to the second number and the fifth number is related to the sixth number.

216 : 344 :: ? : 126 :: 27 : 65

- Ans
- 1. 68
 - 2. 66
 - 3. 70
 - 4. 64

Question ID : 26433051992

Option 1 ID : 264330203270

Option 2 ID : 264330203273

Option 3 ID : 264330203271

Option 4 ID : 264330203272

Status : Answered

Chosen Option : 4

Q.9 Select the set in which the numbers are related in the same way as are the numbers of the following sets.

(NOTE: Operations should be performed on the whole numbers, without breaking down the numbers into its constituent digits. E.g. 13 – Operations on 13 such as adding/subtracting/multiplying etc. to 13 can be performed. Breaking down 13 into 1 and 3 and then performing mathematical operations on 1 and 3 is not allowed)

(7, 16, 168)

(3, 28, 126)

- Ans
- 1. (9, 17, 153)
 - 2. (8, 7, 136)
 - 3. (11, 18, 396)
 - 4. (6, 11, 99)

Question ID : 26433087213

Option 1 ID : 264330342492

Option 2 ID : 264330342489

Option 3 ID : 264330342491

Option 4 ID : 264330342490

Status : Answered

Chosen Option : 4

Q.10 Which of the following options will replace the question mark (?) in the given series?

71, 213, 639, 1917, 5751, ?

- Ans
- 1. 19479
 - 2. 11643
 - 3. 17253
 - 4. 16509

Question ID : 264330109440

Option 1 ID : 264330430040

Option 2 ID : 264330430039

Option 3 ID : 264330430037

Option 4 ID : 264330430038

Status : Answered

Chosen Option : 3

Q.11 Select the correct combination of mathematical signs to sequentially replace the * signs and to balance the given equation.

$8 * 1 * 4 * 2 * 16 * 2 * 8$

- Ans
- 1. = x + x + -
 - 2. + - + x x =
 - 3. x + x - ÷ =
 - 4. ÷ x - + x =

Question ID : 26433085646

Option 1 ID : 264330336286

Option 2 ID : 264330336288

Option 3 ID : 264330336287

Option 4 ID : 264330336285

Status : Answered

Chosen Option : 3

Q.12 Read the given statements and conclusions carefully. Assuming that the information given in the statements is true, even if it appears to be at variance with commonly known facts, decide which of the given conclusions logically follow(s) from the statements.

Statements:

Some backpacks are bags.

All backpacks are luggage.

Conclusions:

I. Some luggage are bags.

II. Some luggage are backpacks.

Ans 1. Neither conclusion I nor II follows

2. Both conclusions I and II follow

3. Only conclusion I follows

4. Only conclusion II follows

Question ID : 26433069513

Option 1 ID : 264330272567

Option 2 ID : 264330272566

Option 3 ID : 264330272564

Option 4 ID : 264330272565

Status : Answered

Chosen Option : 2

Q.13 In a certain code language, 'ORBIT' is written as 'SHAQN' and 'PLANT' is written as 'SMZKO'. How will 'PLUTO' be written in that language?

Ans 1. OKTSN

2. NSTKO

3. NSTKP

4. SSTKQ

Question ID : 26433087171

Option 1 ID : 264330342324

Option 2 ID : 264330342322

Option 3 ID : 264330342323

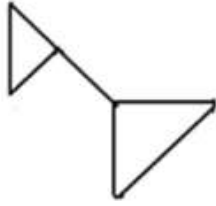
Option 4 ID : 264330342321

Status : Answered

Chosen Option : 2

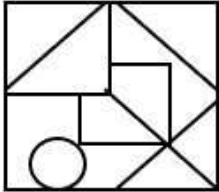
Adda247

Q.14 The given figure is followed by four option figures. Select the option figure in which this figure is embedded (i.e., contains this figure in the same form; rotation is NOT allowed).

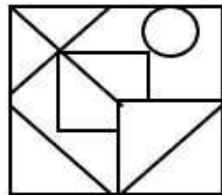


Ans

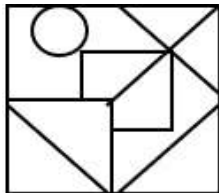
1.



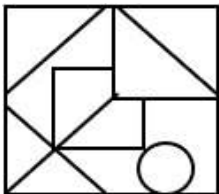
2.



3.



4.



Question ID : 264330121619

Option 1 ID : 264330476650

Option 2 ID : 264330476649

Option 3 ID : 264330476647

Option 4 ID : 264330476648

Status : Answered

Chosen Option : 2

Q.15 Select the option that is related to the fifth letter-cluster in the same way as the second letter-cluster is related to the first letter-cluster and the fourth letter-cluster is related to the third letter-cluster.

BOAT : XESF :: MANY : CREQ :: TIME : ?

Ans 1. JQMW

2. JQMX

3. IQMX

4. IQNY

Question ID : 26433076461

Option 1 ID : 264330299911

Option 2 ID : 264330299908

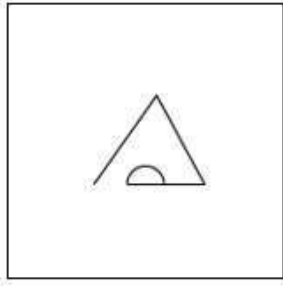
Option 3 ID : 264330299910

Option 4 ID : 264330299909

Status : Answered

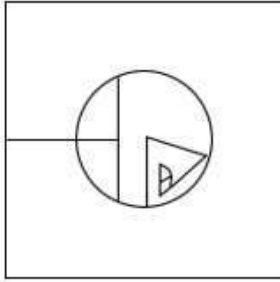
Chosen Option : 3

Q.16 Choose the option figure in which the problem figure is hidden/embedded. (Rotation is not allowed)

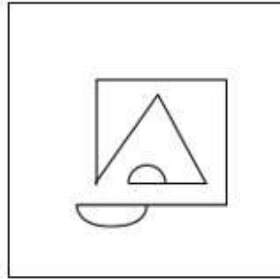


Ans

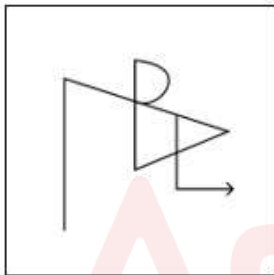
✗ 1.



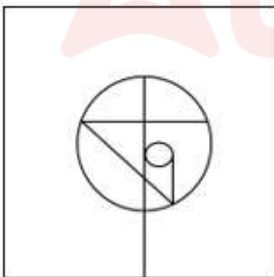
✓ 2.



✗ 3.

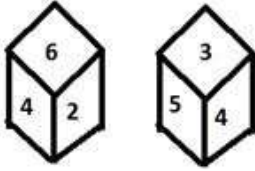


✗ 4.



Question ID : 264330121466
Option 1 ID : 264330476048
Option 2 ID : 264330476049
Option 3 ID : 264330476050
Option 4 ID : 264330476047
Status : Answered
Chosen Option : 2

Q.17 Six numbers 1, 2, 3, 4, 5 and 6 are written on different faces of a dice. Two positions of this dice are shown in the figure. Find the number on the face opposite to 5.



- Ans
- 1. 2
 - 2. 3
 - 3. 1
 - 4. 6

Question ID : 264330117895
 Option 1 ID : 264330463395
 Option 2 ID : 264330463396
 Option 3 ID : 264330463397
 Option 4 ID : 264330463398
 Status : Answered
 Chosen Option : 4

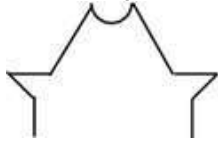
Q.18 Select the correct mirror image of the given figure when the mirror is placed at PQ as shown below.



- Ans
- 1. e d 2 K G 7
 - 2. e p 2 K G 7
 - 3. e p 2 K G 7
 - 4. e p 2 K G 7

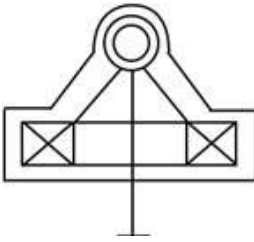
Question ID : 26433080774
 Option 1 ID : 264330317032
 Option 2 ID : 264330317031
 Option 3 ID : 264330317030
 Option 4 ID : 264330317029
 Status : Answered
 Chosen Option : 1

Q.19 Select the option in which the given figure is embedded (rotation is NOT allowed).

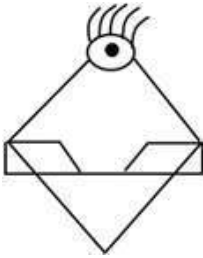


Ans

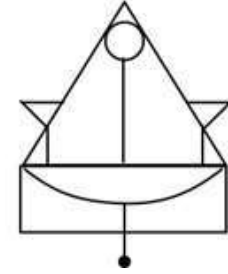
✗ 1.



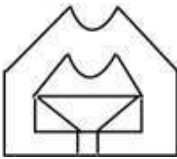
✗ 2.



✓ 3.



✗ 4.



Question ID : 264330111668

Option 1 ID : 264330438757

Option 2 ID : 264330438759

Option 3 ID : 264330438758

Option 4 ID : 264330438760

Status : Answered

Chosen Option : 3

Q.20 Select the correct mirror image of the given figure when the mirror is placed at PQ as shown below.



- Ans
- ✓ 1. **2 A 7 6 F t G**
 - ✗ 2. **2 A 7 6 F t G**
 - ✗ 3. **2 A 7 9 F t G**
 - ✗ 4. **2 A 7 9 F t G**

Question ID : 26433080777
 Option 1 ID : 264330317041
 Option 2 ID : 264330317042
 Option 3 ID : 264330317043
 Option 4 ID : 264330317044
 Status : Answered
 Chosen Option : 1

Q.21 Select the option in which the given figure is embedded (rotation is NOT allowed).



- Ans
- ✗ 1.
 - ✓ 2.
 - ✗ 3.
 - ✗ 4.

Question ID : 264330101155
 Option 1 ID : 264330397166
 Option 2 ID : 264330397168
 Option 3 ID : 264330397165
 Option 4 ID : 264330397167
 Status : Answered
 Chosen Option : 2

Q.22 Select the correct mirror image of the given figure when the mirror is placed at PQ as shown below.


EFEH@!\$%^2



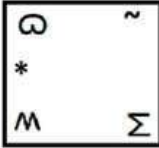
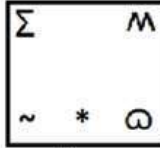
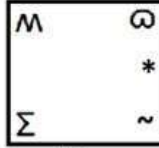
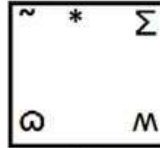

Ans

- 1. $\Sigma^{\wedge}\%!\textcircled{\text{H}}\$H\text{E}\text{F}\text{E}\text{E}$
- 2. $\Sigma^{\wedge}\$!\textcircled{\text{H}}\$H\text{E}\text{F}\text{E}\text{E}$
- 3. $\Sigma^{\wedge}\%!\textcircled{\text{H}}\text{E}\text{F}\text{E}\text{H}\text{E}\text{F}\text{E}\text{E}$
- 4. $\text{E}\text{E}\text{F}\text{E}\text{H}\text{E}\text{F}\text{E}\text{E}\text{H}\text{E}\text{F}\text{E}\text{E}$


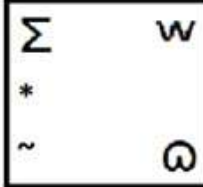
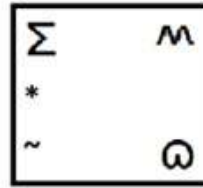
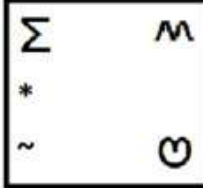
Question ID : 26433082023
Option 1 ID : 264330321925
Option 2 ID : 264330321928
Option 3 ID : 264330321926
Option 4 ID : 264330321927
Status : Answered
Chosen Option : 3



Q.23 Select the figure from among the given options that can replace the question mark (?) in the following series.

				
(i)	(ii)	(iii)	(iv)	(v)

Ans

✗ 1.	
✗ 2.	
✓ 3.	
✗ 4.	

Question ID : 264330106550

Option 1 ID : 264330418502

Option 2 ID : 264330418503

Option 3 ID : 264330418501

Option 4 ID : 264330418504

Status : Answered

Chosen Option : 3

Q.24 Select the figure that will replace the question mark (?) in the following figure series.



Ans

- 1.
- 2.
- 3.
- 4.

Question ID : 264330108954

Option 1 ID : 264330428093

Option 2 ID : 264330428094


Option 3 ID : 264330428096

Option 4 ID : 264330428095

Status : Answered

Chosen Option : 4

Q.25 How many squares are there in the given figure?



- Ans
- 1. 36
 - 2. 40
 - 3. 32
 - 4. 30

Question ID : 26433095001

Option 1 ID : 264330372826

Option 2 ID : 264330372828

Option 3 ID : 264330372827

Option 4 ID : 264330372825

Status : Answered

Chosen Option : 3

Q.1 Simplify the following.

$$\frac{6}{7} + \frac{2}{3}$$
$$\frac{1}{6} - \frac{3}{20}$$

Ans 1. $\frac{640}{7}$

2. $\frac{80}{7}$

3. $\frac{16}{630}$

4. $\frac{640}{133}$

Question ID : 264330104228

Option 1 ID : 264330409216

Option 2 ID : 264330409213

Option 3 ID : 264330409214

Option 4 ID : 264330409215

Status : Answered

Chosen Option : 1

Q.2 In an election between R and S, R wins the election with $\frac{1}{4}$ votes of the votes polled in favour of S. There are no invalid votes. What percentage (rounded off to 2 decimal places) of total votes are voted in favour of R?

Ans 1. 55.56%

2. 52.56%

3. 60.56%

4. 57.56%

Question ID : 264330130168

Option 1 ID : 264330509786

Option 2 ID : 264330509783

Option 3 ID : 264330509784

Option 4 ID : 264330509785

Status : Answered

Chosen Option : 1

Q.3 There are four prime numbers written in ascending order. The product of the first three is 30 and that of the last three is 165. Find the last number.

Ans 1. 11

2. 7

3. 17

4. 13

Question ID : 264330111445

Option 1 ID : 264330437865

Option 2 ID : 264330437866

Option 3 ID : 264330437868

Option 4 ID : 264330437867

Status : Answered

Chosen Option : 1

Q.4 The cost of an item increased to ₹250 from ₹225. What is the percentage increase in the cost?

- Ans 1. 11.11%
 2. 13.33%
 3. 9.5%
 4. 16.66%

Question ID : 264330126099
Option 1 ID : 264330494071
Option 2 ID : 264330494069
Option 3 ID : 264330494070
Option 4 ID : 264330494068
Status : Answered
Chosen Option : 1

Q.5 A shopkeeper gives a discount of 10% on the marked price. If the selling price is ₹6,750, then find the discount.

- Ans 1. ₹750
 2. ₹700
 3. ₹650
 4. ₹800

Question ID : 264330111464
Option 1 ID : 264330437942
Option 2 ID : 264330437943
Option 3 ID : 264330437941
Option 4 ID : 264330437944
Status : Answered
Chosen Option : 1

Q.6 A can complete a work in 16 days and B can complete the same work in 26 days. What will be the number of days required by A and B to complete the same work together?

- Ans 1. $11\frac{20}{21}$
 2. $7\frac{8}{21}$
 3. $9\frac{19}{21}$
 4. $8\frac{11}{21}$

Question ID : 264330104534
Option 1 ID : 264330410440
Option 2 ID : 264330410438
Option 3 ID : 264330410439
Option 4 ID : 264330410437
Status : Answered
Chosen Option : 3

Q.7 If the average of 10 numbers is 625 and the average of 25 numbers is 100, then the average of 35 numbers is equal to _____.

- Ans
- 1. 362.5
 - 2. 66.5
 - 3. 315
 - 4. 250

Question ID : 264330168960
Option 1 ID : 264330662646
Option 2 ID : 264330662644
Option 3 ID : 264330662643
Option 4 ID : 264330662645
Status : Answered
Chosen Option : 4

Q.8 A certain sum amounts to ₹1,725 in 3 years and ₹1,875 in 5 years on simple interest. The interest rate per annum is:

- Ans
- 1. 6%
 - 2. 5%
 - 3. 4%
 - 4. 7%

Question ID : 264330182528
Option 1 ID : 264330715905
Option 2 ID : 264330715904
Option 3 ID : 264330715903
Option 4 ID : 264330715906
Status : Answered
Chosen Option : 2

Q.9 The compound amount of a certain sum of money in 2 years and 3 years becomes ₹12,260 and ₹12,873, respectively. Find the rate of interest.

- Ans
- 1. 7%
 - 2. 6%
 - 3. 5%
 - 4. 4%

Question ID : 264330106007
Option 1 ID : 264330416332
Option 2 ID : 264330416331
Option 3 ID : 264330416330
Option 4 ID : 264330416329
Status : Answered
Chosen Option : 1

Q.10 A football can occupy $36\pi \text{ cm}^3$ of air. Its radius (in cm) will be:

- Ans 1. 5
 2. 2
 3. 4
 4. 3

Question ID : 26433091574
Option 1 ID : 264330359664
Option 2 ID : 264330359661
Option 3 ID : 264330359663
Option 4 ID : 264330359662
Status : Answered
Chosen Option : 4

Q.11 Two stations, A and B are 100 km apart on a straight line. One train starts from A at 7 A.M. and travels towards B at a speed of 20 km/h. Another train starts from B at 8 A.M. and travels towards A at a speed of 25 km/h. At what time they will meet?

- Ans 1. 10.47 A.M.
 2. 11.05 A.M.
 3. 10.37 A.M.
 4. 9.47 A.M.

Question ID : 264330183864
Option 1 ID : 264330721132
Option 2 ID : 264330721133
Option 3 ID : 264330721134
Option 4 ID : 264330721135
Status : Answered
Chosen Option : 1

Q.12 Find the area of triangle whose sides are 6 cm, 8 cm and 10 cm long.

- Ans 1. 12 cm^2
 2. 24 cm^2
 3. 20 cm^2
 4. 28 cm^2

Question ID : 264330111486
Option 1 ID : 264330438029
Option 2 ID : 264330438031
Option 3 ID : 264330438030
Option 4 ID : 264330438032
Status : Answered
Chosen Option : 2

Q.13 Which of the following is the largest ratio?

- Ans 1. 3 : 5
 2. 6 : 5
 3. 4 : 5
 4. 7 : 10

Question ID : 264330119198
Option 1 ID : 264330467079
Option 2 ID : 264330467080
Option 3 ID : 264330467082
Option 4 ID : 264330467081
Status : Answered
Chosen Option : 1

Q.14 A shopkeeper sells two articles at a ₹840 each. He earns a 20% profit on the first article and incurs a 20% loss on the second article. Determine the percentage of net profit or loss he incurs.

- Ans**
- 1. Profit of 5%
 - 2. Loss of 5%
 - 3. Loss of 4%
 - 4. Loss of 3%

Question ID : 264330174055
Option 1 ID : 264330682673
Option 2 ID : 264330682674
Option 3 ID : 264330682672
Option 4 ID : 264330682671
Status : Answered
Chosen Option : 3

Q.15 If the product of two co-prime numbers is 306, then the LCM of the numbers is:

- Ans**
- 1. 306
 - 2. 153
 - 3. 18
 - 4. 17

Question ID : 264330111451
Option 1 ID : 264330437889
Option 2 ID : 264330437890
Option 3 ID : 264330437892
Option 4 ID : 264330437891
Status : Answered
Chosen Option : 1

Section : Computer Proficiency

Q.1 Which of the following is a commonly used word processing package?

- Ans**
- 1. Microsoft Word
 - 2. Microsoft Excel
 - 3. Google Chrome
 - 4. Adobe Photoshop

Question ID : 264330174501
Option 1 ID : 264330684426
Option 2 ID : 264330684424
Option 3 ID : 264330684425
Option 4 ID : 264330684423
Status : Not Answered
Chosen Option : --

Q.2 In MS Excel 365, in which of the following Ribbon tabs does the add rows option reside in MS Excel 365?

- Ans
- 1. Home → Insert
 - 2. Home → File
 - 3. Home → Edit
 - 4. Home → Format

Question ID : 264330182769
Option 1 ID : 264330716848
Option 2 ID : 264330716850
Option 3 ID : 264330716849
Option 4 ID : 264330716847
Status : Not Answered
Chosen Option : --

Q.3 Which of the following CANNOT be the default font size in the font-menu dropdown list in MS Word 365 in Windows 10?

- Ans
- 1. 10
 - 2. 11
 - 3. 9
 - 4. 13

Question ID : 264330180641
Option 1 ID : 264330708532
Option 2 ID : 264330708533
Option 3 ID : 264330708531
Option 4 ID : 264330708534
Status : Not Answered
Chosen Option : --

Q.4 Which technology is commonly used for sending and receiving electronic mail?

- Ans
- 1. Telephony
 - 2. Postal services
 - 3. Fax machines
 - 4. Internet and email protocols

Question ID : 264330173547
Option 1 ID : 264330680667
Option 2 ID : 264330680669
Option 3 ID : 264330680668
Option 4 ID : 264330680670
Status : Answered
Chosen Option : 4

Q.5 In MS Excel 365, which of the following is the shortcut key in MS Excel to print a spread sheet?

- Ans
- 1. Alt + I
 - 2. Ctrl + I
 - 3. Ctrl + P
 - 4. Alt + P

Question ID : 264330180401
Option 1 ID : 264330707573
Option 2 ID : 264330707574
Option 3 ID : 264330707572
Option 4 ID : 264330707571
Status : Answered
Chosen Option : 3

Q.6 Which of the following is/are parts of the standard Structure of Electronic mail?

- Ans 1. Both Header and Body
 2. Only Body
 3. Neither Header nor Body
 4. Only Header

Question ID : 264330176708
Option 1 ID : 264330693049
Option 2 ID : 264330693048
Option 3 ID : 264330693050
Option 4 ID : 264330693047
Status : Not Answered
Chosen Option : --

Q.7 The group of buttons or icons below the menu bar in a word processing software are called:

- Ans 1. status bars
 2. dialog boxes
 3. toolbars
 4. menus

Question ID : 264330178584
Option 1 ID : 264330700366
Option 2 ID : 264330700365
Option 3 ID : 264330700363
Option 4 ID : 264330700364
Status : Answered
Chosen Option : 3

Q.8 What is the full form of NetBIOS?

- Ans 1. Network Basic Input / Output System
 2. Network Based Input / Output System
 3. Networking Binary Input / Output System
 4. Net Binary In / Out System

Question ID : 264330171381
Option 1 ID : 264330672140
Option 2 ID : 264330672142
Option 3 ID : 264330672139
Option 4 ID : 264330672141
Status : Answered
Chosen Option : 2

Q.9 In MS Excel 365, Which of the following shortcut keys is used to save a workbook in MS Excel?

- Ans 1. F6
 2. Ctrl+A
 3. Ctrl+S
 4. F1

Question ID : 264330178595
Option 1 ID : 264330700408
Option 2 ID : 264330700407
Option 3 ID : 264330700409
Option 4 ID : 264330700410
Status : Answered
Chosen Option : 3

Q.10 Which of the following is the correct shortcut key used to increase paragraph indentation in MS Word 365?

- Ans**
- 1. Ctrl + L
 - 2. Ctrl + Tab
 - 3. Ctrl + M
 - 4. Ctrl + I

Question ID : **264330176703**

Option 1 ID : **264330693030**

Option 2 ID : **264330693029**

Option 3 ID : **264330693027**

Option 4 ID : **264330693028**

Status : **Answered**

Chosen Option : **2**



Constable Executive Male and Female in Delhi Police Examination 2023

Roll Number	
Candidate Name	
Venue Name	M D Infotech
Exam Date	20/11/2023
Exam Time	3:00 PM - 4:30 PM
Subject	Constable Executive Male and Female in Delhi Police Examination 2023

Section : General Knowledge

Q.1 राज्य के नीति-निर्देशक सिद्धांत _____ में दिए गए 'निर्देशों के लिखत' के समान हैं।

- Ans 1. भारत सरकार अधिनियम, 1935
 2. भारत सरकार अधिनियम, 1919
 3. भारतीय स्वतंत्रता अधिनियम, 1947
 4. भारत सरकार अधिनियम, 1909

Question ID : 264330114763

Option 1 ID : 264330451139

Option 2 ID : 264330451138

Option 3 ID : 264330451140

Option 4 ID : 264330451137

Status : Answered

Chosen Option : 1

Q.2 यात्रियों की कुल संख्या की दृष्टि से, वर्ष 2022 में भारत का सबसे बड़ा हवाई अड्डा कौन-सा था?

- Ans 1. राजीव गांधी अंतर्राष्ट्रीय हवाई अड्डा (हैदराबाद)
 2. केंपेगोड़ा अंतर्राष्ट्रीय हवाई अड्डा (बेंगलुरु)
 3. छत्रपति शिवाजी महाराज अंतर्राष्ट्रीय हवाई अड्डा (मुंबई)
 4. इंदिरा गांधी अंतर्राष्ट्रीय हवाई अड्डा (दिल्ली)

Question ID : 264330182956

Option 1 ID : 264330717556

Option 2 ID : 264330717558

Option 3 ID : 264330717559

Option 4 ID : 264330717557

Status : Answered

Chosen Option : 4

Q.3 In which of the following years was the twelfth plan completed?

- Ans 1. 2014
 2. 2016
 3. 2017
 4. 2015

Question ID : 264330110168

Option 1 ID : 264330432952

Option 2 ID : 264330432949

Option 3 ID : 264330432951

Option 4 ID : 264330432950

Status : Answered

Chosen Option : 4

Q.4 Which of the following pairs is NOT correctly matched with respect to the player and sport?

- Ans 1. Yogesh Kathuniya – Discus throw
 2. Bhavina Patel – Para-shooting
 3. Nishad Kumar – High jump
 4. LY Suhas – Para-badminton

Question ID : 264330118892
Option 1 ID : 264330466226
Option 2 ID : 264330466224
Option 3 ID : 264330466225
Option 4 ID : 264330466223
Status : Answered
Chosen Option : 3

Q.5 Under which function of the Union Budget does the Government of India build roads and hospitals?

- Ans 1. Stabilisation
 2. Redistribution
 3. Surplus generation
 4. Allocation

Question ID : 264330113538
Option 1 ID : 264330446239
Option 2 ID : 264330446238
Option 3 ID : 264330446240
Option 4 ID : 264330446237
Status : Answered
Chosen Option : 4

Q.6 As per the CMIE's report in December 2022, what was the unemployment rate of the urban population in India?

- Ans 1. 8.12%
 2. 10.09%
 3. 11.09%
 4. 12.03%

Question ID : 264330132754
Option 1 ID : 264330520114
Option 2 ID : 264330520111
Option 3 ID : 264330520113
Option 4 ID : 264330520112
Status : Answered
Chosen Option : 2

Q.7 Belgium won the Men's International Federation Hockey (FIH) 2018 World Cup, which was held in _____.

- Ans
- 1. Australia
 - 2. India
 - 3. Germany
 - 4. Belgium

Question ID : 264330118464
Option 1 ID : 264330465258
Option 2 ID : 264330465257
Option 3 ID : 264330465259
Option 4 ID : 264330465260
Status : Answered
Chosen Option : 2

Q.8 Who among the following became the first Indian musician to be honoured with the Ramon Magsaysay award, which is considered to be Asia's Nobel Prize?

- Ans
- 1. Lata Mangeshkar
 - 2. MS Subbulakshmi
 - 3. Pandit Ravi Shankar
 - 4. Pandit Kumar Gandarva

Question ID : 264330113245
Option 1 ID : 264330445066
Option 2 ID : 264330445065
Option 3 ID : 264330445067
Option 4 ID : 264330445068
Status : Answered
Chosen Option : 3

Q.9 Which of the following organisations regulates international trade?

- Ans
- 1. UNICEF
 - 2. UNESCO
 - 3. IMF
 - 4. WTO

Question ID : 264330108911
Option 1 ID : 264330427923
Option 2 ID : 264330427922
Option 3 ID : 264330427921
Option 4 ID : 264330427924
Status : Answered
Chosen Option : 4

Q.10 भारत के पश्चिमी तटीय क्षेत्रों में मानसून का मौसम समाप्त होने के उपलक्ष्य में हिंदू माह श्रावण के आखिरी दिन कौन सा पर्व मनाया जाता है?

- Ans
- 1. नराली पूर्णिमा
 - 2. कोजागिरी पूर्णिमा
 - 3. साम्बा दशमी
 - 4. गुरु पूर्णिमा

Question ID : 264330182994
Option 1 ID : 264330717709
Option 2 ID : 264330717708
Option 3 ID : 264330717710
Option 4 ID : 264330717711
Status : Answered
Chosen Option : 4

Q.11 From where does most of the refracted light rays enter the eyes?

- Ans 1. From the outer surface of the cornea
 2. From the outer surface of the retina
 3. From the outer surface of the iris
 4. From the inner surface of the cornea

Question ID : 264330135587
Option 1 ID : 264330531248
Option 2 ID : 264330531250
Option 3 ID : 264330531247
Option 4 ID : 264330531249
Status : Answered
Chosen Option : 1

Q.12 साहित्य अकादमी पुरस्कार विजेता माया खुटेगांवकर एक प्रसिद्ध _____ नृत्यांगना हैं।

- Ans 1. बिहु
 2. सुग्गी
 3. लावणी
 4. झूमर

Question ID : 264330106199
Option 1 ID : 264330417098
Option 2 ID : 264330417097
Option 3 ID : 264330417099
Option 4 ID : 264330417100
Status : Answered
Chosen Option : 3

Q.13 संसद _____ की सिफारिश पर राज्य विधान-परिषद बना या समाप्त कर सकती है।

- Ans 1. राज्य विधानसभा
 2. राज्य के राज्यपाल
 3. मुख्यमंत्री
 4. भारत के राष्ट्रपति

Question ID : 264330120194
Option 1 ID : 264330471033
Option 2 ID : 264330471032
Option 3 ID : 264330471034
Option 4 ID : 264330471031
Status : Answered
Chosen Option : 1

Q.14 निम्नलिखित में से कौन-सा अनुच्छेद निर्देशक सिद्धांतों को 'देश के शासन में मौलिक' के रूप में निहित करता है और 'कानून बनाने में इन सिद्धांतों को लागू करने की राज्य से अपेक्षा करता है?

- Ans 1. अनुच्छेद 37
 2. अनुच्छेद 38
 3. अनुच्छेद 39
 4. अनुच्छेद 36

Question ID : 264330118012
Option 1 ID : 264330463864
Option 2 ID : 264330463865
Option 3 ID : 264330463866
Option 4 ID : 264330463863
Status : Answered
Chosen Option : 1

Q.15 हरित क्रांति द्वारा पारंपरिक खेती के विरुद्ध किस कृषि तकनीक को बढ़ावा दिया गया?

- Ans
- 1. जैविक खेती
 - 2. श्रम प्रधान खेती
 - 3. वैज्ञानिक खेती
 - 4. स्वदेशी खेती

Question ID : 264330174153
Option 1 ID : 264330683052
Option 2 ID : 264330683053
Option 3 ID : 264330683054
Option 4 ID : 264330683051
Status : Answered
Chosen Option : 4

Q.16 क्षमादान देने, सजा में राहत देने, स्थगन देने या छूट देने की शक्ति किसके पास है?

- Ans
- 1. राष्ट्रपति
 - 2. प्रधान मंत्री
 - 3. उप-राष्ट्रपति
 - 4. अध्यक्ष (स्पीकर)

Question ID : 264330110597
Option 1 ID : 264330434668
Option 2 ID : 264330434666
Option 3 ID : 264330434665
Option 4 ID : 264330434667
Status : Answered
Chosen Option : 1

Q.17 In which year did Lord Curzon arrive in India as Viceroy?

- Ans
- 1. 1898
 - 2. 1891
 - 3. 1899
 - 4. 1892

Question ID : 264330120152
Option 1 ID : 264330470865
Option 2 ID : 264330470863
Option 3 ID : 264330470866
Option 4 ID : 264330470864
Status : Answered
Chosen Option : 1

Q.18 1882 में, थियोसोफिकल सोसायटी का मुख्यालय _____ में स्थापित किया गया था।

- Ans
- 1. खालियर
 - 2. कलकत्ता
 - 3. अड्यार
 - 4. इलाहाबाद

Question ID : 264330114108
Option 1 ID : 264330448519
Option 2 ID : 264330448517
Option 3 ID : 264330448520
Option 4 ID : 264330448518
Status : Answered
Chosen Option : 2

Q.19 The amphibians of plant kingdom are _____.

- Ans 1. Pteridophytes
 2. Bryophytes
 3. Algae
 4. Fungi

Question ID : 264330117593
Option 1 ID : 264330462398
Option 2 ID : 264330462397
Option 3 ID : 264330462399
Option 4 ID : 264330462400
Status : Answered
Chosen Option : 2

Q.20 Which unusual flavour is observed in dairy products due to the formation of ethyl esters catalysed by esterases produced by lactic acid bacteria?

- Ans 1. Fishy flavour
 2. Musty flavour
 3. Fruity flavour
 4. Bitty flavour

Question ID : 264330131005
Option 1 ID : 264330513131
Option 2 ID : 264330513133
Option 3 ID : 264330513132
Option 4 ID : 264330513134
Status : Answered
Chosen Option : 4

Q.21 निम्नलिखित में से क्या, भारत की जनगणना वाले किसी नगर की परिभाषा के अंतर्गत नहीं आता है?

- Ans 1. जनसंख्या घनत्व 400 व्यक्ति प्रति km²
 2. नगर पालिका, नगर निगम आदि की उपस्थिति
 3. प्राथमिक क्षेत्र में लगी हुई 75% से अधिक जनसंख्या
 4. 5000 व्यक्तियों की न्यूनतम जनसंख्या

Question ID : 264330182968
Option 1 ID : 264330717604
Option 2 ID : 264330717605
Option 3 ID : 264330717606
Option 4 ID : 264330717607
Status : Answered
Chosen Option : 1

Q.22 Which crop is also known as 'golden fibre'?

- Ans 1. Cotton
 2. Wheat
 3. Rice
 4. Jute

Question ID : 264330183058
Option 1 ID : 264330717965
Option 2 ID : 264330717967
Option 3 ID : 264330717966
Option 4 ID : 264330717964
Status : Answered
Chosen Option : 4

Q.23 The 'Infant Mortality Rate' is defined as the number of deaths of infants aged less than one year per _____ live births in a given year.

- Ans
- 1. 5000
 - 2. 1000
 - 3. 100
 - 4. 500

Question ID : 264330179270
Option 1 ID : 264330703086
Option 2 ID : 264330703085
Option 3 ID : 264330703083
Option 4 ID : 264330703084
Status : Answered
Chosen Option : 2

Q.24 मंदिर वास्तुकला की निम्नलिखित में से किस शैली में शिखर को देउल कहा जाता है?

- Ans
- 1. ओडिशा
 - 2. द्रविड़
 - 3. नागर
 - 4. वेसरा

Question ID : 264330111856
Option 1 ID : 264330439509
Option 2 ID : 264330439511
Option 3 ID : 264330439510
Option 4 ID : 264330439512
Status : Answered
Chosen Option : 2

Q.25 Which of the following is NOT an amphibian animal?

- Ans
- 1. Salamander
 - 2. Toad
 - 3. Tortoise
 - 4. Frog

Question ID : 26433064423
Option 1 ID : 264330252284
Option 2 ID : 264330252285
Option 3 ID : 264330252287
Option 4 ID : 264330252286
Status : Answered
Chosen Option : 1

Q.26 Which of the following authors has written the famous novel 'Gulliver's Travels'?

- Ans
- 1. Oscar Wilde
 - 2. Samuel Richardson
 - 3. Jonathan Swift
 - 4. Ruskin Bond

Question ID : 26433066678
Option 1 ID : 264330261239
Option 2 ID : 264330261236
Option 3 ID : 264330261238
Option 4 ID : 264330261237
Status : Answered
Chosen Option : 4

Q.27 आर्य संस्कृति के विभिन्न स्रोतों में _____ प्रमुख हैं।

- Ans 1. अनुष्ठान ग्रंथ
 2. स्मारक
 3. शिलालेख
 4. पुरातात्विक कलाकृतियाँ

Question ID : 264330120133
Option 1 ID : 264330470787
Option 2 ID : 264330470789
Option 3 ID : 264330470790
Option 4 ID : 264330470788
Status : Answered
Chosen Option : 3

Q.28 बादशाह नामा के लेखक कौन थे ?

- Ans 1. सादुल्लाह खान
 2. अबुल फजल
 3. अब्दुल हमीद लाहौरी
 4. बैरम खान

Question ID : 264330114842
Option 1 ID : 264330451455
Option 2 ID : 264330451453
Option 3 ID : 264330451454
Option 4 ID : 264330451456
Status : Answered
Chosen Option : 3

Q.29 Who was the author of 'Raag Darbari'?

- Ans 1. Dharamvir Bharati
 2. Suryakant Tripathi 'Nirala'
 3. Shrilal Shukla
 4. Harivansh Rai Bachchan

Question ID : 26433086914
Option 1 ID : 264330341297
Option 2 ID : 264330341298
Option 3 ID : 264330341300
Option 4 ID : 264330341299
Status : Answered
Chosen Option : 4

Q.30 What is 25-Ponders with reference to the celebration at the Republic Day Parade?

- Ans 1. March-past by the Cavalry
 2. Salute by seven canons of the Indian Army
 3. Salute to the National Flag by the President's bodyguards
 4. Presentation of the tableaux from different states

Question ID : 264330110459
Option 1 ID : 264330434113
Option 2 ID : 264330434114
Option 3 ID : 264330434115
Option 4 ID : 264330434116
Status : Answered
Chosen Option : 4

Q.31 Amaravati Stupa is located in which of these states?

- Ans 1. West Bengal
 2. Andhra Pradesh
 3. Gujarat
 4. Madhya Pradesh

Question ID : 264330109322
Option 1 ID : 264330429566
Option 2 ID : 264330429567
Option 3 ID : 264330429568
Option 4 ID : 264330429565
Status : Answered
Chosen Option : 4

Q.32 Which female singer got the 'Best Playback Singer (Female)' award at the Filmfare Awards 2022?

- Ans 1. Shreya Ghoshal
 2. Priya Saria
 3. Neha Kakkar
 4. Asees Kaur

Question ID : 264330113239
Option 1 ID : 264330445044
Option 2 ID : 264330445042
Option 3 ID : 264330445041
Option 4 ID : 264330445043
Status : Answered
Chosen Option : 3

Q.33 निम्नलिखित में से किसका संबंध किसी हिमनदीय स्थलरूप से है?

- Ans 1. जलोढ़ पंखा (Alluvial fan)
 2. प्लाय (Playas)
 3. यारडांग (Yardangs)
 4. हॉर्न (Horns)

Question ID : 264330131745
Option 1 ID : 264330516080
Option 2 ID : 264330516082
Option 3 ID : 264330516081
Option 4 ID : 264330516079
Status : Answered
Chosen Option : 2

Q.34 Which of the following Constitutional Amendment Acts made it a fundamental duty of parents to educate their child?

- Ans 1. 88th Amendment Act
 2. 87th Amendment Act
 3. 86th Amendment Act
 4. 85th Amendment Act

Question ID : 264330110567
Option 1 ID : 264330434548
Option 2 ID : 264330434547
Option 3 ID : 264330434546
Option 4 ID : 264330434545
Status : Answered
Chosen Option : 3

Q.35 'Samagra Shiksha', a scheme in the area of education subsumes the earlier schemes pertaining to _____.

- Ans 1. Sarva Shiksha Abhiyan, Rashtriya Madhyamik Shiksha Abhiyan and Teacher Education only
2. Sarva Shiksha Abhiyan and Rashtriya Madhyamik Shiksha Abhiyan only
3. Sarva Shiksha Abhiyan only
4. Sarva Shiksha Abhiyan, Teacher Education and Rashtria Avishkar Abhiyan only

Question ID : 264330111778
Option 1 ID : 264330439200
Option 2 ID : 264330439198
Option 3 ID : 264330439197
Option 4 ID : 264330439199
Status : Answered
Chosen Option : 2

Q.36 In which year was the Right to Education (RTE) Act implemented?

- Ans 1. 2009
2. 2010
3. 2015
4. 2012

Question ID : 264330173490
Option 1 ID : 264330680439
Option 2 ID : 264330680440
Option 3 ID : 264330680442
Option 4 ID : 264330680441
Status : Answered
Chosen Option : 1

Q.37 भारत का पहला महिला संगठन, भारत स्त्री महामंडल की स्थापना _____ के द्वारा की गई थी।

- Ans 1. एनी बेसेंट
2. सरला देवी चौधरानी
3. सरोजिनी नायडू
4. सावित्रीबाई फुले

Question ID : 264330171705
Option 1 ID : 264330673426
Option 2 ID : 264330673423
Option 3 ID : 264330673424
Option 4 ID : 264330673425
Status : Answered
Chosen Option : 2

Q.38 Which of the following is a famous folk dance of Bihar?

- Ans 1. Jhijhiya
2. Naga dance
3. Maharas
4. Khel gopal

Question ID : 264330109287
Option 1 ID : 264330429426
Option 2 ID : 264330429427
Option 3 ID : 264330429428
Option 4 ID : 264330429425
Status : Answered
Chosen Option : 1

Q.39 Who among the following is associated with Kathak?

- Ans 1. Kalamandalam Krishnan Nair
 2. Nahid Siddiqui
 3. V Satyanarayana Sarma
 4. Anokhelal Mishra

Question ID : 264330131310
Option 1 ID : 264330514353
Option 2 ID : 264330514352
Option 3 ID : 264330514354
Option 4 ID : 264330514351
Status : Answered
Chosen Option : 4

Q.40 पाल वंश के धर्मपाल को निम्नलिखित में से किस राष्ट्रकूट शासक ने पराजित किया था?

- Ans 1. अमोघवर्ष द्वितीय
 2. गोविंद द्वितीय
 3. कृष्ण प्रथम
 4. ध्रुव

Question ID : 264330183118
Option 1 ID : 264330718206
Option 2 ID : 264330718207
Option 3 ID : 264330718205
Option 4 ID : 264330718204
Status : Answered
Chosen Option : 3

Q.41 निम्नलिखित में से किस नृत्यांगना ने प्रसिद्ध बैलेरीना अन्ना पावलोवा (Anna Pavlova) के अनुरोध पर बैले सीखा?

- Ans 1. सितारा देवी
 2. रुक्मिणी देवी अरुंडेल
 3. सोनल मानसिंह
 4. यामिनी कृष्णमूर्ति

Question ID : 26433086940
Option 1 ID : 264330341401
Option 2 ID : 264330341403
Option 3 ID : 264330341404
Option 4 ID : 264330341402
Status : Answered
Chosen Option : 4

Q.42 In which of the following years was Sati, the practice of widow-burning, banned in India?

- Ans 1. 1875
 2. 1819
 3. 1897
 4. 1829

Question ID : 264330119020
Option 1 ID : 264330466737
Option 2 ID : 264330466735
Option 3 ID : 264330466738
Option 4 ID : 264330466736
Status : Answered
Chosen Option : 4

Q.43 The thickness of the continental crust beneath the Central Himalayas is of the order of _____, marking the end of volcanic activity in the region.

- Ans
- 1. 35–37 km
 - 2. 60–65 km
 - 3. 50–63 km
 - 4. 70–72 km

Question ID : 264330114165
Option 1 ID : 264330448745
Option 2 ID : 264330448746
Option 3 ID : 264330448748
Option 4 ID : 264330448747
Status : Answered
Chosen Option : 1

Q.44 महारौली में लौह स्तंभ का निर्माण निम्नलिखित में से किस राजवंश के शासकों द्वारा करवाया गया था?

- Ans
- 1. मौखरी
 - 2. गुप्त
 - 3. कुषाण
 - 4. मौर्य

Question ID : 264330119955
Option 1 ID : 264330470098
Option 2 ID : 264330470097
Option 3 ID : 264330470096
Option 4 ID : 264330470095
Status : Answered
Chosen Option : 3

Q.45 Which of the following measures is NOT related to the tax reform measures undertaken during the liberalisation phase?

- Ans
- 1. Reduction in rates of income tax
 - 2. Devaluation of Rupee
 - 3. Reforms related to indirect taxes
 - 4. Simplification of tax procedures

Question ID : 264330111604
Option 1 ID : 264330438502
Option 2 ID : 264330438501
Option 3 ID : 264330438503
Option 4 ID : 264330438504
Status : Answered
Chosen Option : 3

Q.46 निम्नलिखित में से कौन-सा 37वें राष्ट्रीय खेलों का शुभंकर है?

- Ans
- 1. मोगा
 - 2. ऑली
 - 3. सावज
 - 4. भीमा

Question ID : 264330176922
Option 1 ID : 264330693883
Option 2 ID : 264330693886
Option 3 ID : 264330693885
Option 4 ID : 264330693884
Status : Answered
Chosen Option : 1

Q.47 Which month marks the approximate arrival of the monsoon in India?

- Ans 1. Early January
 2. Early June
 3. Early February
 4. Early October

Question ID : 264330174342
Option 1 ID : 264330683787
Option 2 ID : 264330683789
Option 3 ID : 264330683788
Option 4 ID : 264330683790
Status : Answered
Chosen Option : 2

Q.48 Which system was prevalent before the invention of money?

- Ans 1. Bretton woods system
 2. Liquidity system
 3. Fiscal system
 4. Barter system

Question ID : 264330120873
Option 1 ID : 264330473707
Option 2 ID : 264330473709
Option 3 ID : 264330473708
Option 4 ID : 264330473710
Status : Answered
Chosen Option : 4

Q.49 निम्नलिखित में से कौन संसद की संयुक्त बैठक की अध्यक्षता करता है?

- Ans 1. भारत के राष्ट्रपति
 2. राज्यसभा के सभापति
 3. भारत के प्रधानमंत्री
 4. लोकसभा अध्यक्ष

Question ID : 264330177755
Option 1 ID : 264330697129
Option 2 ID : 264330697128
Option 3 ID : 264330697130
Option 4 ID : 264330697127
Status : Answered
Chosen Option : 4

Q.50 In which Olympics did Khashaba Jadhav, the first Indian win an individual Olympic medal for India?

- Ans 1. 1972 Munich Olympics
 2. 1948 London Olympics
 3. 1952 Helsinki Olympics
 4. 1936 Berlin Olympics

Question ID : 264330119275
Option 1 ID : 264330467388
Option 2 ID : 264330467389
Option 3 ID : 264330467390
Option 4 ID : 264330467387
Status : Answered
Chosen Option : 3

Q.1 Which two signs should be interchanged to make the following equation correct?

$$48 \div 16 \times 24 - 5 + 3 = 12$$

- Ans
- 1. + and ×
 - 2. + and +
 - 3. - and +
 - 4. + and ×

Question ID : 264330101082

Option 1 ID : 264330396873

Option 2 ID : 264330396874

Option 3 ID : 264330396875

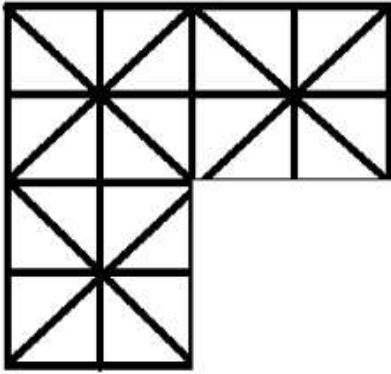
Option 4 ID : 264330396876

Status : Answered

Chosen Option : 4



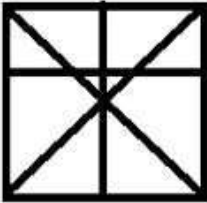
Q.2 Select a figure from amongst the four given options, which when placed in the blank space of figure (X) would complete the pattern.



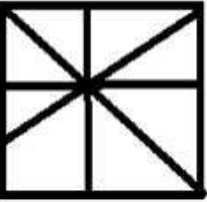
X

Ans

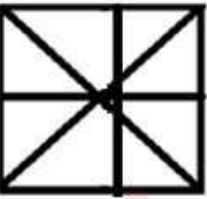
✗ 1.



✗ 2.



✗ 3.



✓ 4.



Question ID : 264330113836

Option 1 ID : 264330447430

Option 2 ID : 264330447431

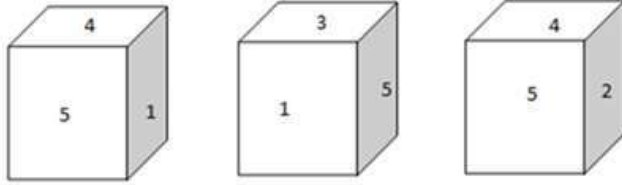
Option 3 ID : 264330447429

Option 4 ID : 264330447432

Status : Answered

Chosen Option : 4

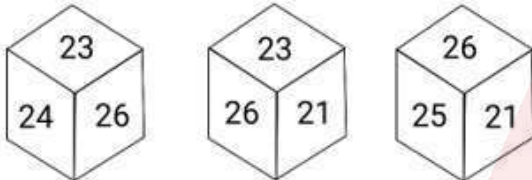
Q.3 Three different positions of the same dice are shown. Find the number on the face opposite the face showing '5'.



- Ans
- 1. 6
 - 2. 4
 - 3. 1
 - 4. 3

Question ID : 264330106476
Option 1 ID : 264330418208
Option 2 ID : 264330418207
Option 3 ID : 264330418205
Option 4 ID : 264330418206
Status : Answered
Chosen Option : 1

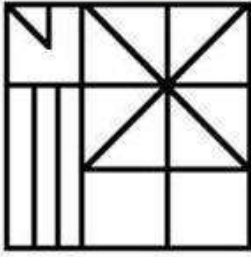
Q.4 Six numbers, 21, 22, 23, 24, 25 and 26 are written on different faces of a dice. Three positions of this dice are shown here. Find the number on the face opposite 26.



- Ans
- 1. 23
 - 2. 22
 - 3. 21
 - 4. 24

Question ID : 264330106412
Option 1 ID : 264330417951
Option 2 ID : 264330417950
Option 3 ID : 264330417949
Option 4 ID : 264330417952
Status : Answered
Chosen Option : 2

Q.5 How many triangles are there in the given figure?



- Ans
- 1. 12
 - 2. 14
 - 3. 17
 - 4. 15

Question ID : 26433078990
Option 1 ID : 264330309972
Option 2 ID : 264330309973
Option 3 ID : 264330309975
Option 4 ID : 264330309974

Status : Answered

Chosen Option : 3

Q.6 Select the word-pair that best represents a similar relationship to the one expressed in the pair of words given below.

(The words must be considered as meaningful English words and must not be related to each other based on the number of letters/number of consonants/vowels in the word.)

False : Untrue

- Ans
- 1. Trip : Journey
 - 2. Fault : Line
 - 3. Higher : Hire
 - 4. Blanket : Winter

Question ID : 26433053232
Option 1 ID : 264330208233
Option 2 ID : 264330208230
Option 3 ID : 264330208232
Option 4 ID : 264330208231

Status : Answered

Chosen Option : 4

Q.7 Anu, Geeta, Mittal, Radha, Hema and Kriti were sitting around a circular table, facing the centre. They were sitting at an equal distance from one another. Hema and Radha were sitting exactly next to each other. Anu was to the immediate right of Kriti. Geeta was to the immediate left of Hema. Mittal is to the immediate right of Radha. Who among the following is sitting to the immediate left of Geeta?

- Ans
- 1. Hema
 - 2. Radha
 - 3. Anu
 - 4. Kriti

Question ID : 26433087007
Option 1 ID : 264330341669
Option 2 ID : 264330341670
Option 3 ID : 264330341671
Option 4 ID : 264330341672

Status : Answered

Chosen Option : 3

Q.8 Which figure should replace the question mark (?) if the series were to be continued?

L	E	O	O	L	E	B	E	S	S	B	E	
	T			B			O			T		?
S	B		T	S		L	T		O	L		

Ans

✓ 1.

T	E	L
S		
B	O	

✗ 2.

T	E	B
S		
L	O	

✗ 3.

S	E	L
T		
B	O	

✗ 4.

B	E	S
T		
L	O	

Question ID : 264330130819

Option 1 ID : 264330512389

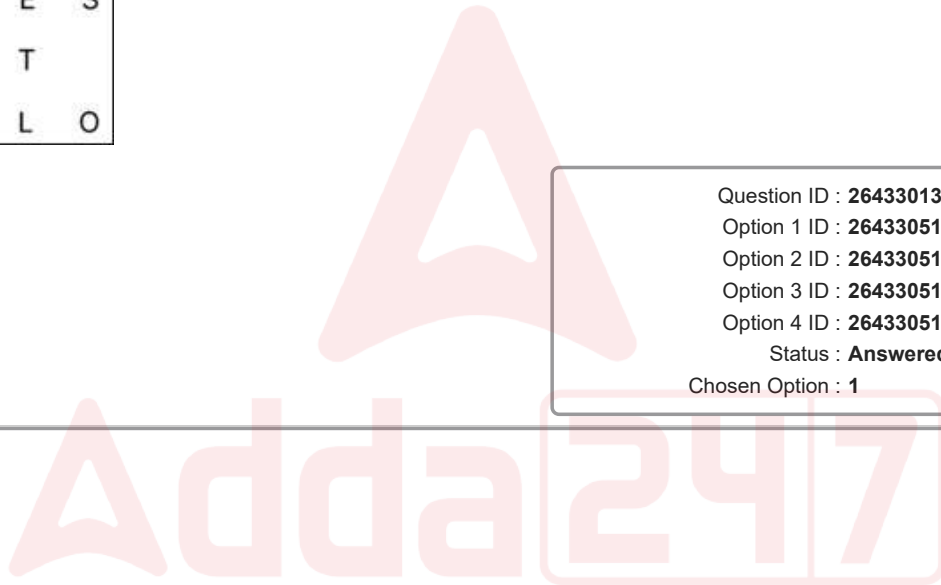
Option 2 ID : 264330512388

Option 3 ID : 264330512387

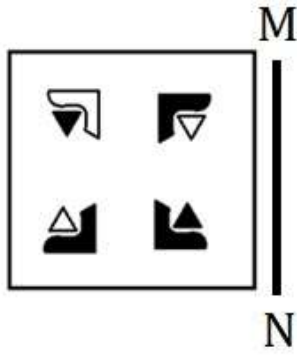
Option 4 ID : 264330512390

Status : Answered

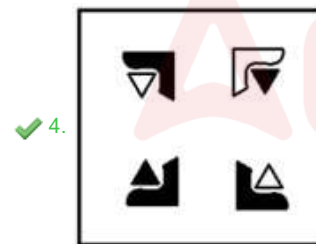
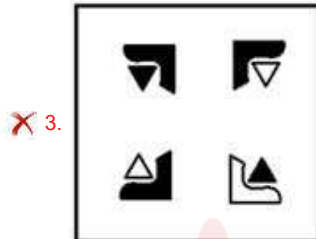
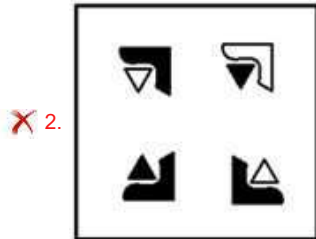
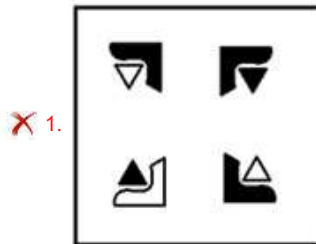
Chosen Option : 1



Q.9 Select the correct mirror image of the given figure when the mirror is placed at MN as shown below.



Ans



Question ID : 264330117427

Option 1 ID : 264330461749

Option 2 ID : 264330461751

Option 3 ID : 264330461752

Option 4 ID : 264330461750

Status : Answered

Chosen Option : 4

Q.10 Select the option that represents the letters that, when sequentially placed from left to right in the blanks below, will complete the letter series.

W _ _ S D _ E A S _ W _ A _ D W E A _ _

- Ans
- 1. EAWSES
 - 2. EAWSES
 - 3. EAWSES
 - 4. EAWSES

Question ID : 26433092543

Option 1 ID : 264330363463

Option 2 ID : 264330363462

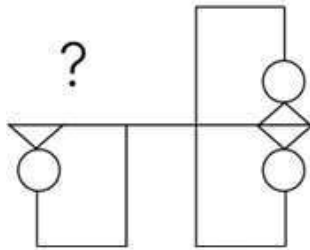
Option 3 ID : 264330363464

Option 4 ID : 264330363461

Status : Answered

Chosen Option : 4

Q.11 Select the figure from the given options that will replace the question mark (?) in the figure given below to complete the pattern so that the final image is symmetrical.



Ans

- 1.
- 2.
- 3.
- 4.

Question ID : 264330114732

Option 1 ID : 264330451014

Option 2 ID : 264330451013

Option 3 ID : 264330451015

Option 4 ID : 264330451016

Status : Answered

Chosen Option : 4

Q.12 Select the correct combination of mathematical signs to sequentially replace the * signs and to balance the given equation.

$$18 * 90 * 3 * 27 * 8 = 0$$

- Ans
- 1. +, -, ×, +
 - 2. -, ×, ÷, -
 - 3. +, ×, -, +
 - 4. ×, ÷, +, -

Question ID : 26433092504

Option 1 ID : 264330363305

Option 2 ID : 264330363308

Option 3 ID : 264330363306

Option 4 ID : 264330363307

Status : Answered

Chosen Option : 2

Q.13 Select the option that is related to the third term in the same way as the second term is related to the first term and the sixth term is related to the fifth term.
20 : 205 :: 75 : ? :: 105 : 1055

- Ans
- 1. 720
 - 2. 750
 - 3. 785
 - 4. 755

Question ID : 264330101053

Option 1 ID : 264330396760

Option 2 ID : 264330396758

Option 3 ID : 264330396757

Option 4 ID : 264330396759

Status : Answered

Chosen Option : 4

Q.14 Select the set in which the numbers are related in the same way as are the numbers of the following sets.

(NOTE: Operations should be performed on the whole numbers, without breaking down the numbers into its constituent digits. E.g. 13 – Operations on 13 such as adding/subtracting/multiplying etc. to 13 can be performed. Breaking down 13 into 1 and 3 and then performing mathematical operations on 1 and 3 is not allowed)
(24, 86, 67)
(39, 64, 71)

- Ans
- 1. (37, 51, 88)
 - 2. (16, 54, 43)
 - 3. (18, 45, 63)
 - 4. (28, 89, 117)

Question ID : 26433087215

Option 1 ID : 264330342497

Option 2 ID : 264330342500

Option 3 ID : 264330342498

Option 4 ID : 264330342499

Status : Answered

Chosen Option : 2

Q.15 Select the number from among the given options that can replace the question mark (?) in the following series.

3, 18, 63, 198, 603, ?

- Ans
- 1. 1479
 - 2. 1200
 - 3. 1500
 - 4. 1818

Question ID : 264330109769

Option 1 ID : 264330431354

Option 2 ID : 264330431353

Option 3 ID : 264330431355

Option 4 ID : 264330431356

Status : Answered

Chosen Option : 4

Q.16 Select the correct mirror image of the given combination when the mirror is placed at 'PQ' as shown below.

A 2 4 G P K | P
Q

- Ans
- 1. K 9 G 4 S A
 - 2. K 9 G 4 S A
 - 3. K 9 G 4 S A
 - 4. K 9 G 4 S A

Question ID : 264330129815

Option 1 ID : 264330508493

Option 2 ID : 264330508494

Option 3 ID : 264330508492

Option 4 ID : 264330508491

Status : Answered

Chosen Option : 4

Q.17 Which figure from the given options would replace the question mark (?) if the following figure series were to be continued?

2	□	V	8	
8	V	C	V	C
□	2	8	P	□
		8	P	□
		8	V	2
				?

Ans

✓ 1.

	P	
V	O	8
	2	

✗ 2.

	P	
V	□	8
	2	

✗ 3.

	2	
8	O	V
	P	

✗ 4.

	V	
□	2	P
	8	

Question ID : 26433044933

Option 1 ID : 264330176170

Option 2 ID : 264330176168

Option 3 ID : 264330176167

Option 4 ID : 264330176169

Status : Answered

Chosen Option : 1

Q.18 In a certain code language, 'STAY' is written as '2732221' and 'FROM' is written as '1517208'. How will 'FIT' be written in that language?

- Ans
- 1. 6920
 - 2. 81221
 - 3. 11226
 - 4. 22118

Question ID : 26433089415

Option 1 ID : 264330351162

Option 2 ID : 264330351163

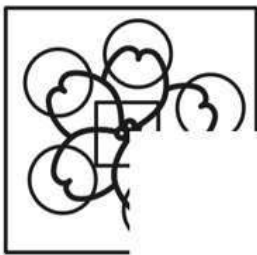
Option 3 ID : 264330351164

Option 4 ID : 264330351161

Status : Answered

Chosen Option : 4

Q.19 Which of the following option figures will complete the pattern in the figure given below?



Ans

- 1.
- 2.
- 3.
- 4.

Question ID : 26433080617

Option 1 ID : 264330316404

Option 2 ID : 264330316401

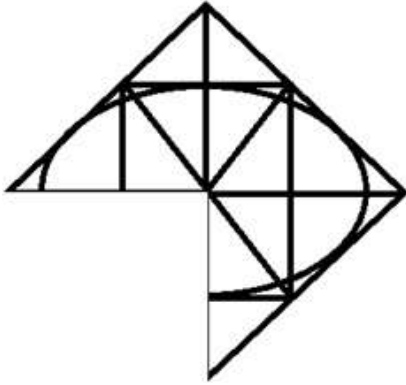
Option 3 ID : 264330316403

Option 4 ID : 264330316402

Status : Answered

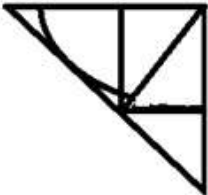
Chosen Option : 1

Q.20 Select the option which when placed in the blank space of the given figure will complete the pattern.

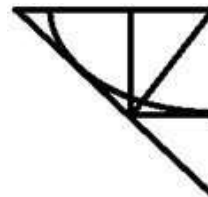


Ans

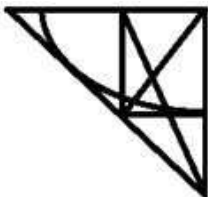
✗ 1.



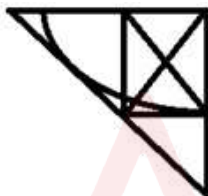
✓ 2.



✗ 3.



✗ 4.



Question ID : 264330112984

Option 1 ID : 264330444024

Option 2 ID : 264330444021

Option 3 ID : 264330444023

Option 4 ID : 264330444022

Status : Answered

Chosen Option : 2

Q.21 Two statements are given followed by two conclusions numbered I and II. Assuming the statements to be true, even if they seem to be at variance with commonly known facts, decide which of the conclusions logically follow(s) from the statements.

Statements:

Some camels are donkeys.

Some donkeys are cows.

Conclusions:

I. Some cows are camels.

II. Some donkeys are camels.

- Ans
- 1. Only conclusion I follows
 - 2. Both conclusions I and II follow
 - 3. Only conclusion II follows
 - 4. Neither conclusion I nor II follows

Question ID : 26433068874

Option 1 ID : 264330270008

Option 2 ID : 264330270010

Option 3 ID : 264330270009

Option 4 ID : 264330270011

Status : Answered

Chosen Option : 3

Q.22 Select the figure that will replace the question mark (?) in the following figure series.



Ans

- 1.
- 2.
- 3.
- 4.

Question ID : 264330112028

Option 1 ID : 264330440200

Option 2 ID : 264330440198

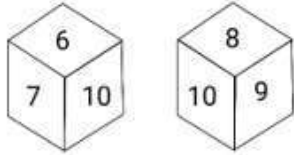
Option 3 ID : 264330440199

Option 4 ID : 264330440197

Status : Answered

Chosen Option : 2

Q.23 Six numbers, 5, 6, 7, 8, 9 and 10, are written on the different faces of a dice. Two positions of this dice are shown in the given figure. Find the number on the face opposite to 5.



Ans 1. 10

2. 6

3. 7

4. 9

Question ID : 264330116607

Option 1 ID : 264330458514

Option 2 ID : 264330458513

Option 3 ID : 264330458516

Option 4 ID : 264330458515

Status : Answered

Chosen Option : 1

Q.24 Select the correct mirror image of the given figure when the mirror is placed at MN as shown below.



Ans 1. \neg P E F k 7

2. \neg P E F k 7

3. \neg P E F k 7

4. \neg P E F k 7

Question ID : 264330166653

Option 1 ID : 264330653651

Option 2 ID : 264330653653

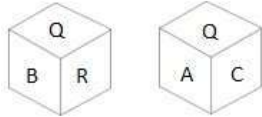
Option 3 ID : 264330653652

Option 4 ID : 264330653654

Status : Answered

Chosen Option : 2

Q.25 Six letters A, B, C, P, Q and R are written on different faces of a dice. Two positions of this dice are shown in the figure. Find the letter on the face opposite to A.



- Ans** 1. B
 2. C
 3. P
 4. R

Question ID : 264330109203
Option 1 ID : 264330429090
Option 2 ID : 264330429092
Option 3 ID : 264330429091
Option 4 ID : 264330429089
Status : Answered
Chosen Option : 1

Section : Numerical Ability

Q.1 If a man walks at five-sixth of his usual speed from his home towards his office, he is 20 minutes late. Find the usual time (in minutes) to cover the distance between his home and his office.

- Ans** 1. 90
 2. 105
 3. 100
 4. 120

Question ID : 264330119427
Option 1 ID : 264330467997
Option 2 ID : 264330467998
Option 3 ID : 264330467995
Option 4 ID : 264330467996
Status : Answered
Chosen Option : 3

Q.2 Simplify $47\frac{37}{50} \times 4\frac{1}{6} \times 24$.

- Ans** 1. 4782.0
 2. 4774.0
 3. 4790.0
 4. 4762.0

Question ID : 264330111442
Option 1 ID : 264330437853
Option 2 ID : 264330437855
Option 3 ID : 264330437854
Option 4 ID : 264330437856
Status : Answered
Chosen Option : 2

Q.3 A alone can build a house in 16 days, but B alone can build it in 12 days. A and B work on alternate days. If A works on the first day, the house will be built in how many days?

Ans

1. $13\frac{3}{4}$
2. $11\frac{3}{4}$
3. $10\frac{3}{4}$
4. $15\frac{3}{4}$

Question ID : 264330103678

Option 1 ID : 264330407017

Option 2 ID : 264330407018

Option 3 ID : 264330407020

Option 4 ID : 264330407019

Status : Answered

Chosen Option : 1

Q.4 A shopkeeper purchased 12 dozen eggs at the rate of ₹60 per dozen. He sold the eggs at ₹6 per piece. What was his profit percentage?

Ans

1. 25%
2. 15%
3. 20%
4. 10%

Question ID : 264330104175

Option 1 ID : 264330409004

Option 2 ID : 264330409002

Option 3 ID : 264330409003

Option 4 ID : 264330409001

Status : Answered

Chosen Option : 3

Q.5 An isosceles right-angled triangle has hypotenuse length as 10 units. What is the area of the triangle (in square units)?

Ans

1. $50\sqrt{2}$
2. 25
3. 50
4. $25\sqrt{2}$

Question ID : 264330126152

Option 1 ID : 264330494283

Option 2 ID : 264330494281

Option 3 ID : 264330494280

Option 4 ID : 264330494282

Status : Answered

Chosen Option : 3

Q.6 किसी संख्या में 18 जोड़ने पर प्राप्त संख्या मूल संख्या की $122\frac{1}{2}\%$ हो जाती है। नई संख्या ज्ञात करें।

- Ans
- 1. 80
 - 2. 82
 - 3. 98
 - 4. 100

Question ID : 264330119506
Option 1 ID : 264330468308
Option 2 ID : 264330468309
Option 3 ID : 264330468310
Option 4 ID : 264330468307
Status : Answered
Chosen Option : 1

Q.7 निम्नलिखित में से किस संख्या समूह में सबसे कम अभाज्य संख्याएँ हैं?

- Ans
- 1. 30 से 49 तक
 - 2. 40 से 60 तक
 - 3. 21 से 40 तक
 - 4. 60 से 80 तक

Question ID : 264330105976
Option 1 ID : 264330416206
Option 2 ID : 264330416207
Option 3 ID : 264330416205
Option 4 ID : 264330416208
Status : Answered
Chosen Option : 3

Q.8 The value of a machine, purchased 3 years ago, depreciates at the annual rate of 15%. If its present value is ₹51,20,000, find its value after 4 years.

- Ans
- 1. ₹26,72,672
 - 2. ₹27,62,267
 - 3. ₹27,76,622
 - 4. ₹26,67,722

Question ID : 264330104318
Option 1 ID : 264330409573
Option 2 ID : 264330409576
Option 3 ID : 264330409574
Option 4 ID : 264330409575
Status : Answered
Chosen Option : 1

Q.9 Three solid cubes of sides 3 cm, 4 cm and 5 cm are melted to form a new solid cube.
Find the surface area (in cm^2) of the cube so formed.

- Ans
- 1. 343
 - 2. 125
 - 3. 216
 - 4. 144

Question ID : 264330112444
Option 1 ID : 264330441864
Option 2 ID : 264330441862
Option 3 ID : 264330441863
Option 4 ID : 264330441861
Status : Answered
Chosen Option : 3

Q.10 An article is marked at a price which gives a profit of 20%. After allowing a certain discount, the profit reduces to 10%. The discount percentage is:

- Ans
- 1. $8\frac{1}{3}\%$
 - 2. $8\frac{2}{3}\%$
 - 3. $7\frac{2}{3}\%$
 - 4. $7\frac{1}{3}\%$

Question ID : 264330111466
Option 1 ID : 264330437952
Option 2 ID : 264330437951
Option 3 ID : 264330437950
Option 4 ID : 264330437949
Status : Answered
Chosen Option : 1

Q.11 The ratio of two numbers is 5:6. If their HCF is 8, what is the LCM of these two numbers?

- Ans
- 1. 480
 - 2. 120
 - 3. 240
 - 4. 360

Question ID : 264330103917
Option 1 ID : 264330407969
Option 2 ID : 264330407971
Option 3 ID : 264330407970
Option 4 ID : 264330407972
Status : Answered
Chosen Option : 3

Q.12 A sum of ₹18,910 is divided among Arjun, Raima and Sohan such that Arjun receives 20% less than Raima, while Sohan receives 25% more than Raima's share. What is the share (in ₹) of Sohan?

- Ans 1. 7,750
 2. 7,700
 3. 8,470
 4. 8,750

Question ID : 264330129994
Option 1 ID : 264330509208
Option 2 ID : 264330509207
Option 3 ID : 264330509210
Option 4 ID : 264330509209
Status : Answered
Chosen Option : 1

Q.13 The ratio of P's salary to Q's salary is 2 : 3. The ratio of Q's salary to R's salary is 4 : 5. What will be the ratio of P's salary to R's salary?

- Ans 1. 3 : 5
 2. 12 : 15
 3. 8 : 12
 4. 8 : 15

Question ID : 264330126578
Option 1 ID : 264330495984
Option 2 ID : 264330495987
Option 3 ID : 264330495986
Option 4 ID : 264330495985
Status : Answered
Chosen Option : 4

Q.14 In how much time will a sum of money double itself at a rate of simple interest of 5% per annum?

- Ans 1. 12 years
 2. 10 years
 3. 20 years
 4. 18 years

Question ID : 264330182519
Option 1 ID : 264330715869
Option 2 ID : 264330715867
Option 3 ID : 264330715870
Option 4 ID : 264330715868
Status : Answered
Chosen Option : 3

Q.15 The average of a, b and c is 35 and the average of a, c and d is 40. If d = 25, then find the value of b.

- Ans 1. 38
 2. 10
 3. 15
 4. 22

Question ID : 264330130064
Option 1 ID : 264330509490
Option 2 ID : 264330509487
Option 3 ID : 264330509488
Option 4 ID : 264330509489
Status : Answered
Chosen Option : 2

Section : Computer Proficiency

Q.1 Which of the following functions in MS Excel 365, generates a real number greater than 0 and is really simple and traditionally used for statistical analysis, cryptography, gaming, gambling, and probability theory, among dozens of other things?

- Ans 1. RAND
 2. AVERAGE
 3. SUM
 4. VLOOKUP

Question ID : 264330180407
Option 1 ID : 264330707597
Option 2 ID : 264330707596
Option 3 ID : 264330707595
Option 4 ID : 264330707598
Status : Answered
Chosen Option : 4

Q.2 माइक्रोसॉफ्ट वर्ड 365 (Microsoft Word 365) में टेक्स्ट पेस्ट करते समय, यदि गंतव्य में पहले से ही टेक्स्ट मौजूद है तो डिफॉल्ट व्यवहार क्या होता है?

- Ans 1. पेस्ट किए गए टेक्स्ट के साथ एक नया डाक्यूमेंट बनाना।
 2. मौजूदा टेक्स्ट ओवरराइट हो जाता है।
 3. टेक्स्ट को ओवरराइट करने या मर्ज करने के बीच चयन करने के लिए उपयोगकर्ता को संकेत (Prompt) देना।
 4. पेस्ट किया गया टेक्स्ट मौजूदा टेक्स्ट के साथ मर्ज हो जाता है।

Question ID : 264330177681
Option 1 ID : 264330696841
Option 2 ID : 264330696839
Option 3 ID : 264330696842
Option 4 ID : 264330696840
Status : Answered
Chosen Option : 4

Q.3 In Microsoft Word 365, on which page is the header or the footer displayed by default?

- Ans
- 1. On first page
 - 2. On every page
 - 3. On last page
 - 4. On middle page

Question ID : 264330182068
Option 1 ID : 264330714111
Option 2 ID : 264330714113
Option 3 ID : 264330714112
Option 4 ID : 264330714114
Status : Answered
Chosen Option : 1

Q.4 Which of the following shortcut keys is used to justify the text in MS Word 365?

- Ans
- 1. Ctrl + B
 - 2. Ctrl + J
 - 3. Ctrl + I
 - 4. Ctrl + U

Question ID : 264330180428
Option 1 ID : 264330707680
Option 2 ID : 264330707679
Option 3 ID : 264330707681
Option 4 ID : 264330707682
Status : Answered
Chosen Option : 2

Q.5 What is the primary purpose of a word processing package like Microsoft Word 365?

- Ans
- 1. Creating spreadsheets
 - 2. Designing presentations
 - 3. Creating and editing documents
 - 4. Sending emails

Question ID : 264330180741
Option 1 ID : 264330708932
Option 2 ID : 264330708933
Option 3 ID : 264330708934
Option 4 ID : 264330708931
Status : Answered
Chosen Option : 3

Q.6 By default, what number of emails in Gmail can be sorted that a user recently received.

- Ans
- 1. 100
 - 2. 25
 - 3. 75
 - 4. 50

Question ID : 264330178094
Option 1 ID : 264330698442
Option 2 ID : 264330698439
Option 3 ID : 264330698441
Option 4 ID : 264330698440
Status : Answered
Chosen Option : 1

Q.7 In MS Excel _____ have a dollar sign (\$) in front of the row number and/or column letter.

- Ans 1. Both absolute reference and mixed reference
 2. Only mixed reference
 3. Only absolute reference
 4. Only relative reference

Question ID : 264330178253
Option 1 ID : 264330699070
Option 2 ID : 264330699069
Option 3 ID : 264330699067
Option 4 ID : 264330699068
Status : Answered
Chosen Option : 2

Q.8 Which of the following shortcut keys is used to get the Help Menu in MS-Word 365?

- Ans 1. F1
 2. Ctrl + F1
 3. Alt + F1
 4. Shift + F1

Question ID : 264330178291
Option 1 ID : 264330699222
Option 2 ID : 264330699219
Option 3 ID : 264330699221
Option 4 ID : 264330699220
Status : Answered
Chosen Option : 1

Q.9 Which of the following is the full form of GPRS?

- Ans 1. General Packet Radio Service
 2. General Packet Release Service
 3. General Protocol Radio Service
 4. Group Packet Radio Service

Question ID : 264330180393
Option 1 ID : 264330707540
Option 2 ID : 264330707542
Option 3 ID : 264330707541
Option 4 ID : 264330707539
Status : Answered
Chosen Option : 1

Q.10 एमएस एक्सेल 365 (MS Excel 365) में कोई फॉर्मूला शुरू करने के लिए निम्नलिखित में से किस प्रतीक का उपयोग किया जाता है?

- Ans 1. \$
 2. &
 3. *
 4. =

Question ID : 264330180822
Option 1 ID : 264330709254
Option 2 ID : 264330709251
Option 3 ID : 264330709253
Option 4 ID : 264330709252
Status : Answered
Chosen Option : 4

Constable Executive Male and Female in Delhi Police Examination 2023

Roll Number	
Candidate Name	
Venue Name	Sai Technobyte Jalgaon
Exam Date	21/11/2023
Exam Time	9:00 AM - 10:30 AM
Subject	Constable Executive Male and Female in Delhi Police Examination 2023

Section : General Knowledge

Q.1 चट्टानों के अध्ययन को क्या कहते हैं?

- Ans 1. शैल विज्ञान
 2. फल विज्ञान
 3. कवक विज्ञान
 4. मृदा विज्ञान

Question ID : 264330134905
Option 1 ID : 264330528556
Option 2 ID : 264330528558
Option 3 ID : 264330528555
Option 4 ID : 264330528557
Status : Answered
Chosen Option : 3

Q.2 निम्नलिखित में से कौन-सी, भारतीय संविधान की संघीय विशेषता नहीं है?

- Ans 1. लिखित संविधान
 2. केंद्र और राज्यों के बीच शक्तियों का बँटवारा
 3. एकल नागरिकता
 4. स्वतंत्र न्यायपालिका

Question ID : 264330117784
Option 1 ID : 264330462951
Option 2 ID : 264330462952
Option 3 ID : 264330462954
Option 4 ID : 264330462953
Status : Answered
Chosen Option : 3

Q.3 2011 की जनगणना के अनुसार, भारत के किस केंद्र शासित प्रदेश में सबसे अधिक लिंगानुपात (प्रति 1000 पुरुषों पर महिलाएँ) है?

- Ans 1. दादरा और नगर हवेली
 2. पुदुचेरी
 3. दमन और दीव
 4. दिल्ली

Question ID : 264330132735
Option 1 ID : 264330520038
Option 2 ID : 264330520036
Option 3 ID : 264330520035
Option 4 ID : 264330520037
Status : Answered
Chosen Option : 1

Q.4 According to the UNDP Human Development Report 2021-22, what was the Human Development Index rank of India?

- Ans 1. 132
 2. 114
 3. 154
 4. 133

Question ID : 264330119916
Option 1 ID : 264330469941
Option 2 ID : 264330469942
Option 3 ID : 264330469940
Option 4 ID : 264330469939
Status : Answered
Chosen Option : 2

Q.5 भारतीय संविधान में कानून के शासन का विचार किस देश से लिया गया है?

- Ans 1. जर्मनी
 2. संयुक्त राज्य अमेरिका
 3. यूनाइटेड किंगडम
 4. फ्रांस

Question ID : 264330183145
Option 1 ID : 264330718313
Option 2 ID : 264330718315
Option 3 ID : 264330718312
Option 4 ID : 264330718314
Status : Answered
Chosen Option : 3

Q.6 Who authored 'Untouchable' depicting the caste system?

- Ans 1. Mulk Raj Anand
 2. Jai Ratan
 3. RK Narayan
 4. Vikram Seth

Question ID : 26433064224
Option 1 ID : 264330251488
Option 2 ID : 264330251489
Option 3 ID : 264330251491
Option 4 ID : 264330251490
Status : Not Answered
Chosen Option : --

Q.7 मूल रूप से, भारत के संविधान में _____ अनुसूचियां थीं।

- Ans 1. 8
 2. 6
 3. 7
 4. 10

Question ID : 264330130428
Option 1 ID : 264330510823
Option 2 ID : 264330510824
Option 3 ID : 264330510826
Option 4 ID : 264330510825
Status : Answered
Chosen Option : 4

Q.8 शासन कला, राजनीतिविज्ञान, आर्थिक नीति और सैन्य रणनीति पर एक प्राचीन भारतीय संस्कृत ग्रंथ 'अर्थशास्त्र' _____ ने लिखा था।

Ans 1. विष्णुगुप्त

2. अशोक

3. चंद्रगुप्त मौर्य

4. बिन्दुसार

Question ID : 264330118952

Option 1 ID : 264330466465

Option 2 ID : 264330466464

Option 3 ID : 264330466463

Option 4 ID : 264330466466

Status : Answered

Chosen Option : 3

Q.9 SAFF चैंपियनशिप 2023 के आयोजन की मेजबानी किस शहर ने की थी?

Ans 1. बेंगलुरु

2. मैंगलोर

3. मैसूर

4. गुलबर्गा

Question ID : 264330176077

Option 1 ID : 264330690603

Option 2 ID : 264330690604

Option 3 ID : 264330690605

Option 4 ID : 264330690606

Status : Answered

Chosen Option : 4

Q.10 'Who moved my interest rate' is the autobiography of D Subbarao who was a _____.

Ans 1. journalist

2. political leader

3. businessman

4. banker

Question ID : 26433071701

Option 1 ID : 264330281228

Option 2 ID : 264330281230

Option 3 ID : 264330281231

Option 4 ID : 264330281229

Status : Answered

Chosen Option : 4

Q.11 एफ़डीआई (FDI) का पूर्ण रूप है ____ ।

Ans 1. फॉरेक्स डायरेक्ट इन्वेस्टमेंट (Forex Direct Investment)

2. फॉरेक्स डीरेगुलेटेड इन्वेस्टमेंट (Forex Deregulated Investment)

3. फॉरेन डायरेक्ट इन्वेस्टमेंट (Foreign Direct Investment)

4. फॉरेन डीरेगुलेटेड इन्वेस्टमेंट (Foreign Deregulated Investment)

Question ID : 26433065489

Option 1 ID : 264330256516

Option 2 ID : 264330256519

Option 3 ID : 264330256518

Option 4 ID : 264330256517

Status : Answered

Chosen Option : 3

Q.12 'Left-arm leg spin' in cricket is known as _____.

- Ans 1. Chinaman ball
 2. off-spin
 3. orthodox spin
 4. leg spin

Question ID : 264330118485
Option 1 ID : 264330465342
Option 2 ID : 264330465343
Option 3 ID : 264330465344
Option 4 ID : 264330465341
Status : Answered
Chosen Option : 2

Q.13 बहमनी साम्राज्य की स्थापना किस वर्ष हुई थी?

- Ans 1. 1325 ईस्वी
 2. 1351 ईस्वी
 3. 1336 ईस्वी
 4. 1347 ईस्वी

Question ID : 264330114036
Option 1 ID : 264330448230
Option 2 ID : 264330448231
Option 3 ID : 264330448229
Option 4 ID : 264330448232
Status : Answered
Chosen Option : 2

Q.14 निम्नलिखित में से कौन-सा, सार्वजनिक क्षेत्र के उद्यमों का स्वामित्व, प्रबंधन और नियंत्रण निजी क्षेत्र के उद्यमियों को किए जाने वाले हस्तांतरण को संदर्भित करता है?

- Ans 1. उदारीकरण
 2. वैश्वीकरण
 3. लाइसेंसिंग
 4. निजीकरण

Question ID : 26433082175
Option 1 ID : 264330322533
Option 2 ID : 264330322534
Option 3 ID : 264330322536
Option 4 ID : 264330322535
Status : Answered
Chosen Option : 3

Q.15 भारती विट्टल, मुख्यतः एक पुरस्कार विजेता _____ नृत्यांगना हैं।

- Ans 1. मोहिनीअट्टम
 2. कुचिपूड़ी
 3. कथकली
 4. भरतनाट्यम

Question ID : 264330181385
Option 1 ID : 264330711466
Option 2 ID : 264330711463
Option 3 ID : 264330711465
Option 4 ID : 264330711464
Status : Answered
Chosen Option : 1

Q.16 भारत सरकार का प्रमुख कार्यक्रम, 'सर्व शिक्षा अभियान' राज्य के नीति निर्देशक सिद्धांतों के निम्नलिखित में से किस प्रावधान को पूरा करता है?

- Ans
- 1. अनुच्छेद 44
 - 2. अनुच्छेद 45
 - 3. अनुच्छेद 42
 - 4. अनुच्छेद 43

Question ID : 264330110585
Option 1 ID : 264330434619
Option 2 ID : 264330434620
Option 3 ID : 264330434617
Option 4 ID : 264330434618
Status : Answered
Chosen Option : 3

Q.17 निम्नलिखित में से किस मंत्रालय ने राष्ट्रीय कौशल विकास निगम (National Skill Development Corporation) की स्थापना की थी?

- Ans
- 1. वित्त मंत्रालय
 - 2. जनजातीय कार्य मंत्रालय
 - 3. शिक्षा मंत्रालय
 - 4. कौशल विकास और उद्यमशीलता मंत्रालय

Question ID : 264330110138
Option 1 ID : 264330432831
Option 2 ID : 264330432832
Option 3 ID : 264330432830
Option 4 ID : 264330432829
Status : Answered
Chosen Option : 4

Q.18 निम्नलिखित में से किसे विशेष रूप से दिल्ली सल्तनत के सैन्य संगठन की देखभाल के लिए स्थापित किया गया था?

- Ans
- 1. दीवान-ए-अर्ज
 - 2. दीवान-ए-क्रादा
 - 3. दीवान-ए-इंशा
 - 4. दीवान-ए-विजारत

Question ID : 264330119482
Option 1 ID : 264330468213
Option 2 ID : 264330468214
Option 3 ID : 264330468212
Option 4 ID : 264330468211
Status : Answered
Chosen Option : 2

Q.19 किसी प्रजाति का उसको प्रभावित करने वाले सभी जैविक और अजैविक कारकों के साथ उसके अंतर्संबंध को क्या कहा जाता है?

- Ans 1. पारिस्थितिक ताक (Ecological niche)
 2. खाद्य जाल (Food web)
 3. खाद्य श्रृंखला (Food chain)
 4. प्राकृतिक वास (Habitat)

Question ID : 264330120954
Option 1 ID : 264330474032
Option 2 ID : 264330474033
Option 3 ID : 264330474034
Option 4 ID : 264330474031
Status : Answered
Chosen Option : 4

Q.20 'Mintonette' is related to which of the following sports?

- Ans 1. Cricket
 2. Basketball
 3. Handball
 4. Volleyball

Question ID : 264330118479
Option 1 ID : 264330465317
Option 2 ID : 264330465319
Option 3 ID : 264330465320
Option 4 ID : 264330465318
Status : Answered
Chosen Option : 4

Q.21 गंगमेई अलुना काबुईनी एक प्रसिद्ध आदिवासी 'काबुई' नर्तकी है, जो निम्नलिखित में से किस राज्य से जुड़ी है?

- Ans 1. असम
 2. गोवा
 3. ओडिशा
 4. मणिपुर

Question ID : 264330106196
Option 1 ID : 264330417085
Option 2 ID : 264330417088
Option 3 ID : 264330417087
Option 4 ID : 264330417086
Status : Answered
Chosen Option : 2

Q.22 कोशिकीय अंगकों और सतह स्थलाकृति प्रतिबिंबन के लिए कोशिका जैविकी शोध में किस तकनीक का उपयोग किया जाता है?

- Ans
- 1. अवस्था विपर्यासी सूक्ष्मदर्शिकी (Phase contrast microscopy)
 - 2. क्रमवीक्षण इलेक्ट्रॉन सूक्ष्मदर्शिकी (Scanning electron microscopy)
 - 3. अदीप्त क्षेत्र सूक्ष्मदर्शिकी (Dark-field microscopy)
 - 4. प्रतिदीप्ति सूक्ष्मदर्शिकी (Fluorescence microscopy)

Question ID : 264330130993
Option 1 ID : 264330513083
Option 2 ID : 264330513085
Option 3 ID : 264330513086
Option 4 ID : 264330513084
Status : Not Answered
Chosen Option : --

Q.23 यूनेस्को की विश्व धरोहर स्थल की सूची में शामिल महाबोधि मंदिर कहाँ स्थित है?

- Ans
- 1. देवरिया
 - 2. पटना
 - 3. कुशीनगर
 - 4. बोधगया

Question ID : 26433074098
Option 1 ID : 264330290513
Option 2 ID : 264330290514
Option 3 ID : 264330290512
Option 4 ID : 264330290515
Status : Answered
Chosen Option : 3

Q.24 भारत की जनगणना 2011 के अनुसार, सबसे कम साक्षरता दर, केंद्र शासित प्रदेश _____ में दर्ज की गई थी।

- Ans
- 1. अंडमान व नोकोबार द्वीप समूह
 - 2. चंडीगढ़
 - 3. पांडिचेरी
 - 4. दादरा और नगर हवेली

Question ID : 264330182973
Option 1 ID : 264330717625
Option 2 ID : 264330717627
Option 3 ID : 264330717626
Option 4 ID : 264330717624
Status : Answered
Chosen Option : 3

Q.25 निम्नलिखित में से कौन ऋग्वेद में वर्णित 3 सबसे महत्वपूर्ण देवताओं में से एक नहीं है?

- Ans
- 1. सोम
 - 2. अग्नि
 - 3. इंद्र
 - 4. प्रजापति

Question ID : 264330183110
Option 1 ID : 264330718175
Option 2 ID : 264330718172
Option 3 ID : 264330718173
Option 4 ID : 264330718174
Status : Answered
Chosen Option : 4

Q.26 LPG को छोटे सिलिंडरों में उच्च दाब के अंतर्गत संग्रहित किया जाता है क्योंकि _____ ।

- Ans
- 1. गैस, द्रव रूप में बदल जाती है, जिससे भंडारण के लिए कम जगह की आवश्यकता होती है
 - 2. यह सामान्य तापमान पर आसानी से जलती है
 - 3. सिलिंडर में गैस का भंडारण नहीं हो सकता है
 - 4. द्रव वहन करने में हल्का होता है

Question ID : 264330177024

Option 1 ID : 264330694291

Option 2 ID : 264330694292

Option 3 ID : 264330694294

Option 4 ID : 264330694293

Status : Answered

Chosen Option : 1

Q.27 वर्ष 1904 में, भारत में पहला सीमेंट प्लांट कहाँ स्थापित किया गया था?

- Ans
- 1. मुंबई
 - 2. कोलकाता
 - 3. दिल्ली
 - 4. चेन्नई

Question ID : 264330119779

Option 1 ID : 264330469392

Option 2 ID : 264330469393

Option 3 ID : 264330469394

Option 4 ID : 264330469391

Status : Answered

Chosen Option : 1

Q.28 मधु मंसूरी हसमुख _____ राज्य के एक गायक, गीतकार और कार्यकर्ता हैं।

- Ans
- 1. झारखंड
 - 2. आंध्र प्रदेश
 - 3. छत्तीसगढ़
 - 4. मध्य प्रदेश

Question ID : 264330110248

Option 1 ID : 264330433270

Option 2 ID : 264330433271

Option 3 ID : 264330433269

Option 4 ID : 264330433272

Status : Not Answered

Chosen Option : --

Q.29 2016 के किस संविधान संशोधन अधिनियम में जीएसटी परिषद की स्थापना का प्रावधान किया गया है?

- Ans
- 1. 99वाँ
 - 2. 103वाँ
 - 3. 101वाँ
 - 4. 100वाँ

Question ID : 264330120171

Option 1 ID : 264330470939

Option 2 ID : 264330470942

Option 3 ID : 264330470941

Option 4 ID : 264330470940

Status : Answered

Chosen Option : 4

Q.30 वस्तु विनिमय प्रणाली (बार्टर सिस्टम) से आप क्या समझते हैं?

- Ans
- 1. मुद्रा के बदले वस्तु की खरीद
 - 2. वस्तु के बदले वस्तु की खरीद और बिक्री
 - 3. कोई खरीद या बिक्री नहीं
 - 4. मुद्रा के बदले वस्तु की बिक्री

Question ID : 264330110159
Option 1 ID : 264330432913
Option 2 ID : 264330432916
Option 3 ID : 264330432915
Option 4 ID : 264330432914
Status : Answered
Chosen Option : 2

Q.31 उत्तरी मैदानों का पश्चिमी भाग निम्नलिखित में से किस नदी प्रणाली द्वारा निर्मित है?

- Ans
- 1. गंगा और उसकी सहायक नदियों
 - 2. सिंधु और उसकी सहायक नदियों
 - 3. ब्रह्मपुत्र और उसकी सहायक नदियों
 - 4. महानदी और उसकी सहायक नदियों

Question ID : 264330177099
Option 1 ID : 264330694591
Option 2 ID : 264330694592
Option 3 ID : 264330694593
Option 4 ID : 264330694594
Status : Answered
Chosen Option : 4

Q.32 भारत के प्रधानमंत्री ने दिसंबर 2022 में _____ मेट्रो चरण-1 को राष्ट्र को समर्पित किया।

- Ans
- 1. जयपुर
 - 2. शिमला
 - 3. नागपुर
 - 4. अमृतसर

Question ID : 264330120365
Option 1 ID : 264330471714
Option 2 ID : 264330471711
Option 3 ID : 264330471713
Option 4 ID : 264330471712
Status : Answered
Chosen Option : 3

Q.33 1793 के स्थायी बंदोबस्त अधिनियम का उद्देश्य ईस्ट इंडिया कंपनी और _____ के बीच निश्चित राजस्व संग्रह के लिए एक समझौता करना था।

- Ans
- 1. मजदूरों
 - 2. जमींदारों
 - 3. आम आदमी
 - 4. किसानों

Question ID : 264330118994
Option 1 ID : 264330466634
Option 2 ID : 264330466633
Option 3 ID : 264330466632
Option 4 ID : 264330466631
Status : Answered
Chosen Option : 2

Q.34 1929 में निम्नलिखित में से किस अधिनियम के क्रियान्वयन का विरोध करने के लिए भगत सिंह और उनके एक सहयोगी ने दिल्ली में केंद्रीय विधानसभा में बम फेंका था?

- Ans
- 1. वर्नाक्युलर प्रेस अधिनियम
 - 2. रोलेट अधिनियम
 - 3. भारत रक्षा अधिनियम
 - 4. बाल विवाह निरोधक अधिनियम

Question ID : 264330118993

Option 1 ID : 264330466630

Option 2 ID : 264330466627

Option 3 ID : 264330466628

Option 4 ID : 264330466629

Status : Answered

Chosen Option : 1

Q.35 कॉलमों का सुमेलन कीजिए।

खाद्य सामग्री	पता लगाने के लिए प्रयुक्त रसायन/अभिकर्मक/परीक्षण
i. स्टार्च	a. एक्रोलिन परीक्षण
ii. वसा	b. बाइयूरेट परीक्षण
iii. प्रोटीन	c. आयोडीन
iv. हैलोजेनोएल्केन लवण	d. सिल्वर नाइट्रेट

- Ans
- 1. i-c, ii-a, iii-b, iv-d
 - 2. i-c, ii-d, iii-a, iv-b
 - 3. i-d, ii-c, iii-b, iv-a
 - 4. i-c, ii-d, iii-b, iv-a

Question ID : 264330138007

Option 1 ID : 264330540635

Option 2 ID : 264330540636

Option 3 ID : 264330540638

Option 4 ID : 264330540637

Status : Not Answered

Chosen Option : --

Q.36 एक पारंपरिक खेल यूबी लकड़ी किस राज्य में खेला जाता है?

- Ans
- 1. मणिपुर
 - 2. अरुणाचल प्रदेश
 - 3. हिमाचल प्रदेश
 - 4. झारखंड

Question ID : 264330119279

Option 1 ID : 264330467406

Option 2 ID : 264330467405

Option 3 ID : 264330467404

Option 4 ID : 264330467403

Status : Answered

Chosen Option : 1

Q.37 राज्य विधानमंडल की सदस्यता के बिना किसी व्यक्ति को कितने माह तक मुख्यमंत्री नियुक्त किया जा सकता है?

- Ans 1. 6 माह
 2. 2 वर्ष
 3. 15 माह
 4. 1 वर्ष

Question ID : 264330173537
Option 1 ID : 264330680627
Option 2 ID : 264330680630
Option 3 ID : 264330680628
Option 4 ID : 264330680629
Status : Answered
Chosen Option : 1

Q.38 1828 में ब्रिटिश भारत के निम्नलिखित समाज सुधारकों में से किसके द्वारा ब्रह्म समाज की स्थापना की गई थी?

- Ans 1. ज्योतिबा फुले
 2. रवीन्द्रनाथ टैगोर
 3. बाबा आम्टे
 4. राजा राम मोहन राय

Question ID : 264330182741
Option 1 ID : 264330716737
Option 2 ID : 264330716736
Option 3 ID : 264330716738
Option 4 ID : 264330716735
Status : Answered
Chosen Option : 4

Q.39 असम में सुकरेश्वर मंदिर एक _____ है।

- Ans 1. शिव मंदिर
 2. विष्णु मंदिर
 3. राम मंदिर
 4. कृष्ण मंदिर

Question ID : 26433072938
Option 1 ID : 264330285946
Option 2 ID : 264330285945
Option 3 ID : 264330285944
Option 4 ID : 264330285947
Status : Answered
Chosen Option : 2

Q.40 _____ निर्मित करने की शक्ति केवल विधान सभा के पास होती है।

- Ans 1. ड्राफ्ट
 2. धन विधेयक
 3. परमादेश
 4. अधिनियम

Question ID : 26433086863
Option 1 ID : 264330341094
Option 2 ID : 264330341096
Option 3 ID : 264330341095
Option 4 ID : 264330341093
Status : Answered
Chosen Option : 2

Q.41 Which is the largest component of GDP?

- Ans 1. Investment
 2. Consumption
 3. Government purchase
 4. Net exports

Question ID : 264330116508
Option 1 ID : 264330458120
Option 2 ID : 264330458117
Option 3 ID : 264330458118
Option 4 ID : 264330458119
Status : Answered
Chosen Option : 1

Q.42 एल बिनो देवी को किस प्रकार के नृत्य के लिए संगीत नाटक अकादमी पुरस्कार मिला?

- Ans 1. कथकली
 2. सलिया
 3. घूमर
 4. मणिपुरी

Question ID : 26433074880
Option 1 ID : 264330293610
Option 2 ID : 264330293608
Option 3 ID : 264330293611
Option 4 ID : 264330293609
Status : Answered
Chosen Option : 2

Q.43 हरित क्रांति मुख्य रूप से किन फसलों के लिए थी?

- Ans 1. बाजरा और चावल
 2. गेहूँ और चावल
 3. जौ और बाजरा
 4. गेहूँ और बाजरा

Question ID : 264330117754
Option 1 ID : 264330462833
Option 2 ID : 264330462831
Option 3 ID : 264330462834
Option 4 ID : 264330462832
Status : Answered
Chosen Option : 2

Q.44 वर्षण पैटर्न के संदर्भ में, गर्म समशीतोष्ण जलवायु में Cf का क्या अर्थ है?

- Ans 1. मौसमी वर्षण
 2. बूँदा बांटी वर्षण
 3. हिम वर्षण
 4. साल भर वर्षण

Question ID : 264330131012
Option 1 ID : 264330513159
Option 2 ID : 264330513161
Option 3 ID : 264330513162
Option 4 ID : 264330513160
Status : Not Answered
Chosen Option : --

Q.45 पांचवीं पंचवर्षीय योजना का प्रारूप किसने तैयार और लॉन्च किया था?

- Ans
- 1. मनमोहन सिंह
 - 2. जयप्रकाश नारायण
 - 3. बिबेक देबरॉय
 - 4. डी.पी. धर

Question ID : 264330109992
Option 1 ID : 264330432248
Option 2 ID : 264330432247
Option 3 ID : 264330432246
Option 4 ID : 264330432245
Status : Answered
Chosen Option : 2

Q.46 राष्ट्रीय युवा दिवस निम्न में से किस व्यक्तित्व की जन्मतिथि पर मनाया जाता है?

- Ans
- 1. ए. पी. जे. अब्दुल कलाम
 - 2. नेताजी सुभाष चंद्र बोस
 - 3. स्वामी विवेकानंद
 - 4. विक्रम साराभाई

Question ID : 264330109309
Option 1 ID : 264330429515
Option 2 ID : 264330429514
Option 3 ID : 264330429516
Option 4 ID : 264330429513
Status : Answered
Chosen Option : 2

Q.47 शकूर खान निम्नलिखित में से किस वाद्य-यंत्र से जुड़े है?

- Ans
- 1. रुद्र वीणा
 - 2. शहनाई
 - 3. वायोलिन
 - 4. सारंगी

Question ID : 264330111935
Option 1 ID : 264330439825
Option 2 ID : 264330439826
Option 3 ID : 264330439827
Option 4 ID : 264330439828
Status : Answered
Chosen Option : 3

Q.48 निम्नलिखित में से किसने 1875 में अलीगढ़ मुस्लिम विश्वविद्यालय की स्थापना की थी?

- Ans
- 1. आगा खान
 - 2. नवाब सलीमुल्लाह
 - 3. सैय्यद अहमद खॉं
 - 4. मोहम्मद इकबाल

Question ID : 264330119009
Option 1 ID : 264330466691
Option 2 ID : 264330466693
Option 3 ID : 264330466694
Option 4 ID : 264330466692
Status : Answered
Chosen Option : 1

Q.49 भगवान महावीर द्वारा निर्वाण प्राप्त करने के उपलक्ष्य में बिहार के पावापुरी में जैन समुदाय द्वारा निम्नलिखित में से कौन-सा त्योहार मनाया जाता है?

- Ans
- 1. रोट तीज
 - 2. देव दीपावली
 - 3. ज्ञान पंचमी
 - 4. पर्युषण

Question ID : 264330132416
Option 1 ID : 264330518762
Option 2 ID : 264330518760
Option 3 ID : 264330518761
Option 4 ID : 264330518759
Status : Answered
Chosen Option : 3

Q.50 विलासिनी नाट्यम का प्रसिद्ध कलाकार निम्नलिखित में से कौन है?

- Ans
- 1. अदिति मंगलदास
 - 2. लीला सैमसन
 - 3. गिरिजा देवी
 - 4. स्वप्नसुंदरी

Question ID : 26433086932
Option 1 ID : 264330341372
Option 2 ID : 264330341369
Option 3 ID : 264330341370
Option 4 ID : 264330341371
Status : Not Answered
Chosen Option : --

Section : Reasoning

Adda247

Q.1 निम्नलिखित श्रृंखला को जारी रखने के लिए प्रश्न चिह्न (?) के स्थान पर कौन सी आकृति आनी चाहिए?

Q	8	W	W	C	Q	♡	Q	8	8	W	♡	C	♡	Q	
	C			7			W			7			8		?
7		♡	♡		8	7		C	C		Q	7		W	

Ans

✓ 1.

Q	8	C
	7	
W		♡

✗ 2.

Q	C	♡
	7	
W		8

✗ 3.

C	8	Q
	7	
W		♡

✗ 4.

Q	♡	C
	7	
W		8

Question ID : 264330103901

Option 1 ID : 264330407905

Option 2 ID : 264330407906

Option 3 ID : 264330407908

Option 4 ID : 264330407907

Status : Answered

Chosen Option : 2

Q.2 दर्पण को नीचे दिए गए चित्र के अनुसार PQ पर रखे जाने पर दी गई आकृति का

दर्पण में निर्मित सही प्रतिबिंब चयनित कीजिए।



Ans

1. X U E 2 f 3 N

2. N E f 2 E U X

3. N E f 2 E U X

4. N E f 3 E U X

Question ID : 26433080781

Option 1 ID : 264330317057

Option 2 ID : 264330317059

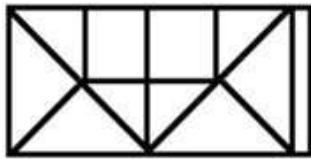
Option 3 ID : 264330317060

Option 4 ID : 264330317058

Status : Answered

Chosen Option : 3

Q.3 दी गई आकृति में कितने त्रिभुज हैं?



Ans 1. 12

2. 14

3. 10

4. 8

Question ID : 26433079025

Option 1 ID : 264330310106

Option 2 ID : 264330310107

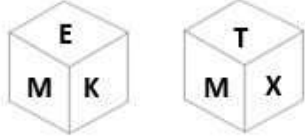
Option 3 ID : 264330310105

Option 4 ID : 264330310104

Status : Answered

Chosen Option : 2

Q.4 एक पासे के अलग-अलग फलकों पर छः अक्षर M, E, K, T, X और B लिखे गए हैं। इस पासे की दो स्थितियों को चित्र में दिखाया गया है। E के विपरीत फलक पर अक्षर ज्ञात कीजिए।



- Ans
- 1. X
 - 2. T
 - 3. K
 - 4. M

Question ID : 264330129793

Option 1 ID : 264330508406

Option 2 ID : 264330508405

Option 3 ID : 264330508404

Option 4 ID : 264330508403

Status : Answered

Chosen Option : 2

Q.5 एक निश्चित कूट भाषा में, 'VALUE' को 'GWNCX' के रूप में लिखा जाता है और 'PLANT' को 'VPCNR' के रूप में लिखा जाता है। उसी भाषा में 'BRAIN' को कैसे लिखा जाएगा?

- Ans
- 1. PCKTD
 - 2. CTDPK
 - 3. PKCTD
 - 4. PKCDT

Question ID : 26433087170

Option 1 ID : 264330342317

Option 2 ID : 264330342320

Option 3 ID : 264330342319

Option 4 ID : 264330342318

Status : Answered

Chosen Option : 3

Q.6 उस विकल्प का चयन कीजिए, जो तीसरे शब्द से उसी प्रकार संबंधित है, जिस प्रकार दूसरा शब्द पहले शब्द से संबंधित है।
(शब्दों को अंग्रेजी/हिंदी के अर्थपूर्ण शब्दों के रूप में माना जाना चाहिए और ये शब्द, अक्षरों की संख्या/ व्यंजनों/स्वरों की संख्या के आधार पर एक-दूसरे से संबंधित नहीं होने चाहिए।)
पुस्तकालय : कैटेलाॅग :: भोजनालय : ?

- Ans
- 1. बुकलेट
 - 2. मेन्
 - 3. इंडेक्स
 - 4. रेसिपी बुक

Question ID : 26433070282

Option 1 ID : 264330275606

Option 2 ID : 264330275605

Option 3 ID : 264330275604

Option 4 ID : 264330275607

Status : Answered

Chosen Option : 1

Q.7 उस समुच्चय का चयन करें जिसमें दी गई संख्याएं आपस में उसी प्रकार संबंधित हैं, जिस प्रकार प्रश्न में दिए गए समुच्चय की संख्याएं आपस में संबंधित हैं।
(नोट: संख्याओं को उसके घटक अंकों में विभाजित किए बिना, पूर्ण संख्याओं पर ही गणितीय संक्रियाएँ की जानी चाहिए। जैसे 13 - मान लीजिए 13 पर गणितीय संक्रियाएँ जैसे कि 13 में जोड़ना/घटाना/गुणा करना आदि किया जा सकता है। 13 को 1 और 3 में तोड़कर और फिर 1 और 3 पर गणितीय संक्रियाएँ करने की अनुमति नहीं है।)
(6, 9, 2)
(12, 36, 2)

- Ans 1. (12, 6, 4)
 2. (14, 7, 7)
 3. (18, 9, 6)
 4. (10, 8, 5)

Question ID : 26433087042
Option 1 ID : 264330341810
Option 2 ID : 264330341812
Option 3 ID : 264330341811
Option 4 ID : 264330341809
Status : Answered
Chosen Option : 3

Q.8 जब दर्पण को MN पर, जैसा कि दिखाया गया है, रखा जाता है तब दिए गए संयोजन के सही दर्पण प्रतिबिंब का चयन कीजिए।

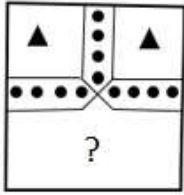
R d 3 G c 5 f

M
|
N

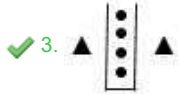
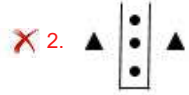
- Ans 1. f 5 c 3 G d R
 2. f 2 c 3 b R
 3. R b R c 3 f
 4. f 2 c 3 b R

Question ID : 264330121697
Option 1 ID : 264330476962
Option 2 ID : 264330476959
Option 3 ID : 264330476960
Option 4 ID : 264330476961
Status : Answered
Chosen Option : 4

Q.9 दिए गए विकल्पों में से उस आकृति का चयन कीजिए जो पैटर्न को पूर्ण करने के लिए नीचे दी गई आकृति में प्रश्न चिह्न (?) के स्थान पर आएगी।



Ans



Question ID : 264330117969

Option 1 ID : 264330463691

Option 2 ID : 264330463692

Option 3 ID : 264330463694

Option 4 ID : 264330463693

Status : Answered

Chosen Option : 3

Adda247

Q.10 यदि श्रृंखला को जारी रखना हो, तो प्रश्न चिह्न (?) के स्थान पर कौन-सी आकृति आनी चाहिए?

6	I	I	V	C	N	N	6	
C	□	V	2	6	□	□	2	6
2		C		I		□		?

Ans

✓ 1.

□	S
2	I
	C
	N

✗ 2.

6	S
C	2
	I
	N

✗ 3.

6	□
2	I
	C
	N

✗ 4.

□	S
C	2
	I
	N

Question ID : 264330130814

Option 1 ID : 264330512370

Option 2 ID : 264330512368

Option 3 ID : 264330512367

Option 4 ID : 264330512369

Status : Answered

Chosen Option : 3

Q.11 निम्नलिखित में से कौन सा पद (अक्षर-समूह) दी गई श्रृंखला में प्रश्न चिह्न (?) के स्थान पर आएगा?
COL, FMO, IKR, ?, OGX

Ans ✗ 1. LIV

✓ 2. LIU

✗ 3. KJV

✗ 4. KIV

Question ID : 264330102179

Option 1 ID : 264330401184

Option 2 ID : 264330401183

Option 3 ID : 264330401181

Option 4 ID : 264330401182

Status : Answered

Chosen Option : 2

Q.12 S, T, U, V और W पांच बहनें एक सीधी पंक्ति में उत्तर की ओर मुख करके बैठी हैं। V, S के दाएं दूसरे स्थान पर बैठी है। W, T के बाएं दूसरे स्थान पर बैठी है। V पंक्ति के दाएं सिरे पर बैठी है। पंक्ति के ठीक बीच में कौन बैठी है?

Ans 1. W

2. S

3. U

4. T

Question ID : 26433090117

Option 1 ID : 264330353947

Option 2 ID : 264330353948

Option 3 ID : 264330353946

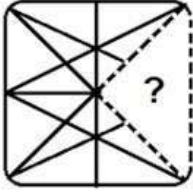
Option 4 ID : 264330353945

Status : Answered

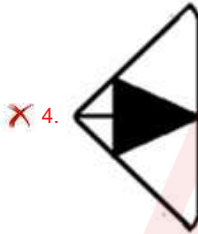
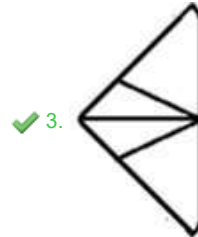
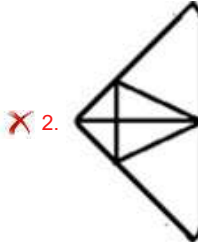
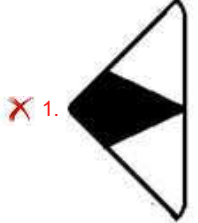
Chosen Option : 2



Q.13 उस विकल्प का चयन कीजिए जो प्रतिरूप को पूरा करने के लिए नीचे दी गई आकृति में प्रश्न चिह्न (?) के स्थान पर आ सकता है।



Ans



Question ID : 264330103152

Option 1 ID : 264330404913

Option 2 ID : 264330404915

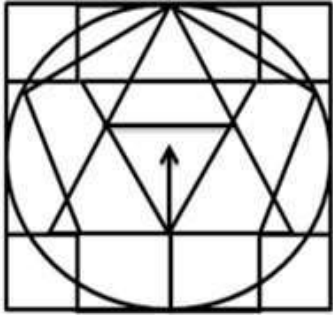
Option 3 ID : 264330404914

Option 4 ID : 264330404916

Status : Answered

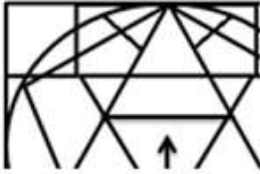
Chosen Option : 3

Q.14 विकल्पों में से उस आकृति का चयन करें, जो दी गई आकृति में सन्निकित है (घुमाने की अनुमति नहीं है)।

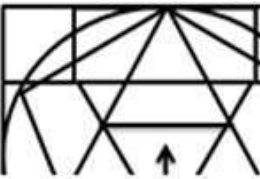


Ans

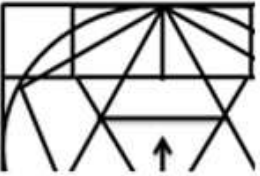
✗ 1.



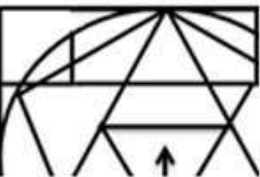
✓ 2.



✗ 3.



✗ 4.



Adda247

Question ID : 264330114404

Option 1 ID : 264330449703

Option 2 ID : 264330449702

Option 3 ID : 264330449701

Option 4 ID : 264330449704

Status : Answered

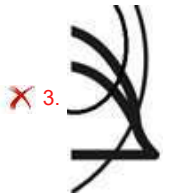
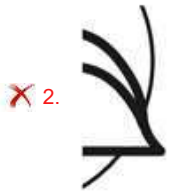

Chosen Option : 1

Q.15 निम्नलिखित में से कौन-सी विकल्प आकृति नीचे दी गई आकृति के स्वरूप

(पैटर्न) को पूरा करेगी?



Ans



Question ID : 26433080596

Option 1 ID : 264330316320

Option 2 ID : 264330316317

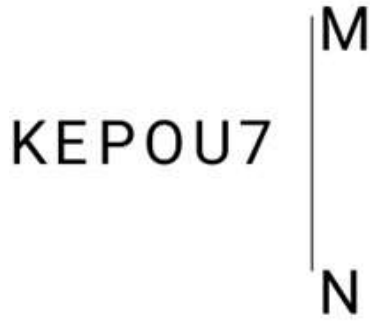
Option 3 ID : 264330316318

Option 4 ID : 264330316319

Status : Answered

Chosen Option : 4

Q.16 जब दर्पण को नीचे दर्शाए गए अनुसार MN रेखा पर रखा जाता है, तो दी गई आकृति के सही दर्पण प्रतिबिंब का चयन करें।




Ans

- ✓ 1. KEPOU7
- ✗ 2. KEPOU7
- ✗ 3. KEPOU7
- ✗ 4. KEPOU7

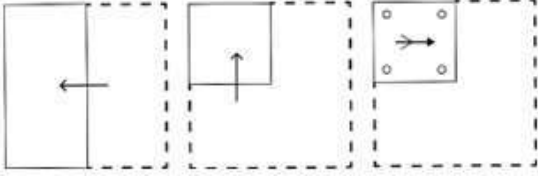
Question ID : 264330126682
Option 1 ID : 264330496401
Option 2 ID : 264330496403
Option 3 ID : 264330496402
Option 4 ID : 264330496400

Status : Answered

Chosen Option : 1




Q.17 एक कागज को नीचे दिखाए अनुसार मोड़ा और काटा जाता है। खोलने पर यह कैसा दिखाई देगा?

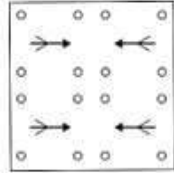


Ans

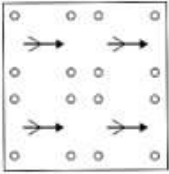
✗ 1.




✓ 2.



✗ 3.



✗ 4.



Question ID : 264330114704

Option 1 ID : 264330450902

Option 2 ID : 264330450904

Option 3 ID : 264330450901

Option 4 ID : 264330450903

Status : Answered

Chosen Option : 2

Q.18 निम्नलिखित समीकरण को सही बनाने के लिए किन दो चिहनों को आपस में बदला जाना चाहिए?

$$17 - 2 + 39 \div 3 \times 7 = 40$$

Ans ✗ 1. + और -

✗ 2. + और ×

✗ 3. - और +

✓ 4. - और ×

Question ID : 264330101090

Option 1 ID : 264330396905

Option 2 ID : 264330396908

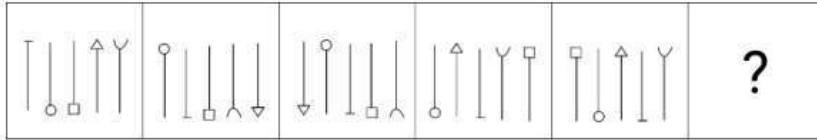
Option 3 ID : 264330396906

Option 4 ID : 264330396907

Status : Answered

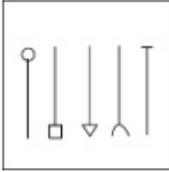
Chosen Option : 4

Q.19 निम्नलिखित श्रृंखला को जारी रखने के लिए प्रश्न चिह्न (?) के स्थान पर कौन सी आकृति आनी चाहिए?

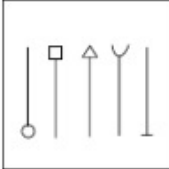


Ans

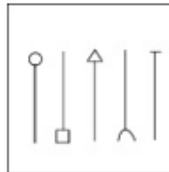
✗ 1.



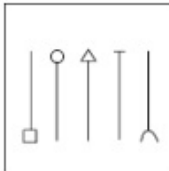
✗ 2.



✓ 3.



✗ 4.



Question ID : 264330103862

Option 1 ID : 264330407751

Option 2 ID : 264330407750

Option 3 ID : 264330407749

Option 4 ID : 264330407752

Status : Answered

Chosen Option : 1

Q.20 दिए गए कथनों और निष्कर्षों को ध्यानपूर्वक पढ़िए। यह मानते हुए कि कथनों में दी गई जानकारी सत्य है, भले ही वह सामान्य रूप से ज्ञात तथ्यों से भिन्न प्रतीत होती हो, तय कीजिए कि दिए गए निष्कर्षों में से कौन-सा/से निष्कर्ष कथनों का तार्किक रूप से अनुसरण करता है/करते हैं।

कथन:

- कुछ बोटलें, खिड़कियां हैं।
- कुछ खिड़कियां, हैंडल हैं।
- सभी दरवाजे, हैंडल हैं।

निष्कर्ष:

- I. कुछ बोटलें, हैंडल हैं।
- II. कुछ खिड़कियां, बोटलें हैं।
- III. कुछ दरवाजे, बोटलें हैं।

- Ans
- 1. निष्कर्ष I, II और III अनुसरण करते हैं
 - 2. निष्कर्ष I और II अनुसरण करते हैं
 - 3. निष्कर्ष I और III अनुसरण करते हैं
 - 4. केवल निष्कर्ष II अनुसरण करता है

Question ID : 26433078849

Option 1 ID : 264330309409

Option 2 ID : 264330309411

Option 3 ID : 264330309408

Option 4 ID : 264330309410

Status : Answered

Chosen Option : 4

Q.21 दिए गए समीकरण को सही करने के लिए निम्नलिखित में से किन दो गणितीय चिह्नों को आपस में बदला जाना चाहिए?

$$658 \times 14 \div 3 - 32 + 56 = 165$$

- Ans
- 1. + और +
 - 2. + और -
 - 3. ÷ और ×
 - 4. + और =

Question ID : 26433085735

Option 1 ID : 264330336644

Option 2 ID : 264330336641

Option 3 ID : 264330336642

Option 4 ID : 264330336643

Status : Answered

Chosen Option : 3

Q.22 निम्नलिखित में से कौन-सा विकल्प दी गई श्रृंखला में प्रश्नवाचक चिन्ह (?) को प्रतिस्थापित करेगा?
323, 646, 969, 1292, ?

- Ans
- 1. 1486
 - 2. 1615
 - 3. 1276
 - 4. 1200

Question ID : 264330109438

Option 1 ID : 264330430030

Option 2 ID : 264330430032

Option 3 ID : 264330430029

Option 4 ID : 264330430031

Status : Answered

Chosen Option : 2

Q.23 दर्पण को चित्र में दिखाए अनुसार रेखा MN पर रखे जाने पर, दिए गए संयोजन का सही दर्पण प्रतिबिंब चयन करें।

a p 5 h 3 7
M
N

- Ans
- ✓ 1. 7 3 h 2 q 6
 - ✗ 2. 7 3 h 2 d 6
 - ✗ 3. 7 3 4 5 q 6
 - ✗ 4. 7 3 h 2 d a

Question ID : 26433068207

Option 1 ID : 264330267341

Option 2 ID : 264330267342

Option 3 ID : 264330267340

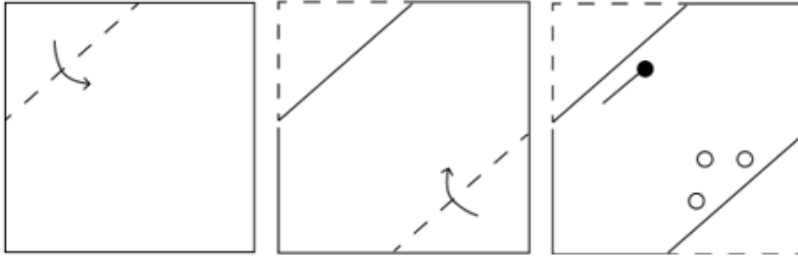
Option 4 ID : 264330267343

Status : Answered

Chosen Option : 1

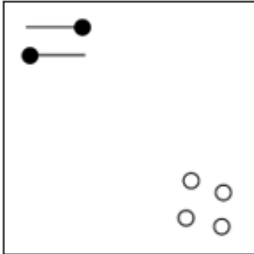


Q.24 कागज की एक वर्गाकार शीट को बिंदीदार रेखा के अनुदिश दिखाए गए निर्देशों के अनुसार क्रमिक रूप से मोड़ा जाता है और फिर अंत में इसे छिद्रित किया जाता है। कागज को खोलने पर यह कैसा दिखेगा?

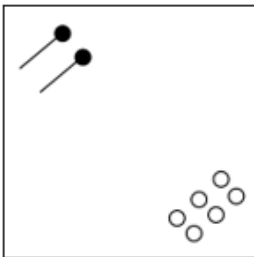


Ans

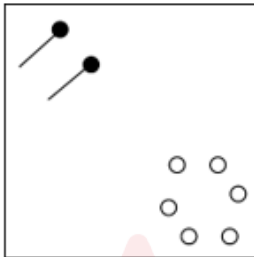
✗ 1.



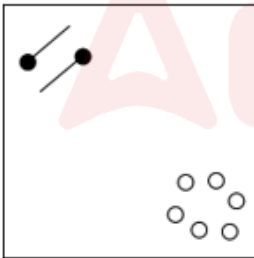
✗ 2.



✓ 3.



✗ 4.



Question ID : 264330172410

Option 1 ID : 264330676194

Option 2 ID : 264330676191

Option 3 ID : 264330676193

Option 4 ID : 264330676192

Status : Answered

Chosen Option : 3

Q.25 उस विकल्प का चयन करें जो तीसरे पद से उसी प्रकार संबंधित है जिस प्रकार दूसरा पद पहले पद से और छठा पद पांचवें पद से संबंधित है।
4 : 11 :: 8 : ? :: 12 : 35

- Ans
- 1. 39
 - 2. 31
 - 3. 23
 - 4. 15

Question ID : 264330101052
Option 1 ID : 264330396756
Option 2 ID : 264330396755
Option 3 ID : 264330396753
Option 4 ID : 264330396754
Status : Answered
Chosen Option : 3

Section : Numerical Ability

Q.1 एक निश्चित राशि साधारण ब्याज की एक निश्चित दर पर दो वर्ष बाद ₹4,620 हो जाती है और समान दर पर ढाई वर्ष बाद ₹4,725 हो जाती है। वार्षिक प्रतिशत दर ज्ञात कीजिए।

- Ans
- 1. 6%
 - 2. 4%
 - 3. 3%
 - 4. 5%

Question ID : 264330119523
Option 1 ID : 264330468378
Option 2 ID : 264330468376
Option 3 ID : 264330468375
Option 4 ID : 264330468377
Status : Answered
Chosen Option : 4

Q.2 15 छात्रों की किसी कक्षा का औसत भार 30 kg है। एक नया छात्र शामिल होता है और औसत भार 1 kg बढ़ जाता है। नए छात्र का वजन (kg में) ज्ञात कीजिए।

- Ans
- 1. 45
 - 2. 42
 - 3. 40
 - 4. 46

Question ID : 264330129918
Option 1 ID : 264330508905
Option 2 ID : 264330508903
Option 3 ID : 264330508904
Option 4 ID : 264330508906
Status : Answered
Chosen Option : 4

Q.3 12, 36 और 80 का लघुतम समापवर्त्य ज्ञात कीजिए।

Ans 1. 720

2. 360

3. 480

4. 1440

Question ID : 264330103649

Option 1 ID : 264330406903

Option 2 ID : 264330406901

Option 3 ID : 264330406904

Option 4 ID : 264330406902

Status : Answered

Chosen Option : 4

Q.4 एक कस्बे की जनसंख्या 7,000 है। यदि पुरुष और महिला जनसंख्या में प्रतिशत वृद्धि क्रमशः 11% और 8% है, तो नई जनसंख्या 7,680 होगी। कस्बे में महिला नागरिकों की संख्या ज्ञात कीजिए।

Ans 1. 2500

2. 4000

3. 4500

4. 3000

Question ID : 264330119508

Option 1 ID : 264330468317

Option 2 ID : 264330468315

Option 3 ID : 264330468318

Option 4 ID : 264330468316

Status : Answered

Chosen Option : 4

Q.5 A और B मिलकर किसी काम को 24 दिन में पूरा कर सकते हैं, जबकि B अकेला उसे 48 दिन में पूरा कर सकता है। A अकेले इस काम को कितने दिन में पूरा कर सकेगा?

Ans 1. 48 दिन

2. 58 दिन

3. 42 दिन

4. 36 दिन

Question ID : 264330104536

Option 1 ID : 264330410445

Option 2 ID : 264330410448

Option 3 ID : 264330410447

Option 4 ID : 264330410446

Status : Answered

Chosen Option : 1

Q.6 यदि X का 60% = Y का 40% है, तो X : Y का मान ज्ञात कीजिए।

- Ans
- 1. 3 : 5
 - 2. 2 : 5
 - 3. 3 : 2
 - 4. 2 : 3

Question ID : 264330104241

Option 1 ID : 264330409268

Option 2 ID : 264330409267

Option 3 ID : 264330409265

Option 4 ID : 264330409266

Status : Answered

Chosen Option : 3

Q.7 श्याम एक नोटबुक को उसके क्रय मूल्य के बराबर लाभ प्रतिशत के साथ ₹24 में बेचता है। श्याम के लिए उस नोटबुक का क्रय मूल्य कितना था?

- Ans
- 1. ₹20
 - 2. ₹18
 - 3. ₹24
 - 4. ₹16

Question ID : 264330118067

Option 1 ID : 264330464084

Option 2 ID : 264330464085

Option 3 ID : 264330464083

Option 4 ID : 264330464086

Status : Answered

Chosen Option : 1

Q.8 ₹5,19,500 की राशि, $7\frac{4}{5}\%$ प्रति वर्ष चक्रवृद्धि ब्याज दर पर उधार ली गई और दो समान वार्षिक किस्तों में 2 वर्षों में वापस इसका भुगतान किया गया। किस्त ज्ञात कीजिए?

- Ans
- 1. ₹3,00,521
 - 2. ₹2,70,521
 - 3. ₹2,90,521
 - 4. ₹2,80,521

Question ID : 264330103624

Option 1 ID : 264330406801

Option 2 ID : 264330406804

Option 3 ID : 264330406802

Option 4 ID : 264330406803

Status : Answered

Chosen Option : 3

Q.9 What is the mean proportional of 16.81 and 12.96?

- Ans 1. 14.76
 2. 16.48
 3. 21.52
 4. 18.36

Question ID : 264330168929
Option 1 ID : 264330662521
Option 2 ID : 264330662522
Option 3 ID : 264330662519
Option 4 ID : 264330662520
Status : Answered
Chosen Option : 2

Q.10 88 km दूर स्थित दो स्थानों से आकाश और विकास एक ही समय में एक दूसरे की ओर चलना शुरू करते हैं और 8 घंटे के बाद एक दूसरे से मिलते हैं। यदि आकाश अपनी चाल की $\frac{7}{6}$ चाल से यात्रा करता है और विकास अपनी चाल की तिगुनी चाल से यात्रा करता है, तो वे 4 घंटे बाद मिलते हैं। विकास की चाल क्या है?

- Ans 1. 7 km/h
 2. 6 km/h
 3. 4 km/h
 4. 5 km/h

Question ID : 264330104418
Option 1 ID : 264330409976
Option 2 ID : 264330409975
Option 3 ID : 264330409973
Option 4 ID : 264330409974
Status : Answered
Chosen Option : 2

Q.11 A hollow spherical vessel has external and internal radii of 10.5 cm and 7.7 cm respectively. What is the mass (in kg, rounded off to the nearest tens) of the sphere if it is made of metal of density 10.3 g/cm^3 ?
(Take $\pi = \frac{22}{7}$)

- Ans 1. 32
 2. 30
 3. 28
 4. 25

Question ID : 264330110271
Option 1 ID : 264330433362
Option 2 ID : 264330433361
Option 3 ID : 264330433363
Option 4 ID : 264330433364
Status : Not Answered
Chosen Option : --

Q.12 620 और 248 का एच.सी.एफ. (HCF) ज्ञात करें।

Ans 1. 124

2. 132

3. 126

4. 128

Question ID : 264330104468

Option 1 ID : 264330410176

Option 2 ID : 264330410175

Option 3 ID : 264330410173

Option 4 ID : 264330410174

Status : Answered

Chosen Option : 1

Q.13 The area of the base of a right circular cone is $25\pi \text{ cm}^2$ and its height is 12 cm. What is the curved surface area (in cm^2) of the cone?

Ans 1. 67π

2. 73π

3. 65π

4. 83π

Question ID : 264330169003

Option 1 ID : 264330662815

Option 2 ID : 264330662817

Option 3 ID : 264330662816

Option 4 ID : 264330662818

Status : Not Answered

Chosen Option : --

Q.14 Find the HCF of $3^2 \times 4^2 \times 9$, and $3^3 \times 4^4 \times 9^{10}$.

Ans 1. 1310

2. 1290

3. 1280

4. 1296

Question ID : 264330112412

Option 1 ID : 264330441736

Option 2 ID : 264330441734

Option 3 ID : 264330441733

Option 4 ID : 264330441735

Status : Answered

Chosen Option : 4

Q.15 एक विक्रेता किसी वस्तु की खरीद पर 10% और 20% की व्यापार छूट देता है, जिसका अंकित मूल्य ₹500 है। एक अन्य विक्रेता उसी वस्तु पर 30% की छूट देता है। उनके विक्रय मूल्य (₹ में) के बीच कितना अंतर है?

Ans 1. 10

2. 11

3. 12

4. 15

Question ID : 264330183840

Option 1 ID : 264330721036

Option 2 ID : 264330721037

Option 3 ID : 264330721038

Option 4 ID : 264330721039

Status : Answered

Chosen Option : 1

Section : Computer Proficiency

Q.1 Which of the following groups in the Home tab of MS word 365, consists of Bullets and Numbering?

Ans 1. Paragraph

2. Clipboard

3. Editing

4. Font

Question ID : 264330175967

Option 1 ID : 264330690165

Option 2 ID : 264330690163

Option 3 ID : 264330690166

Option 4 ID : 264330690164

Status : Answered

Chosen Option : 3

Q.2 Which of the following bars provides a shortcut to menu commands which are represented in the form of icons?

Ans 1. Space Bar

2. Tool Bar

3. Menu bar

4. Vertical Bar

Question ID : 264330178294

Option 1 ID : 264330699233

Option 2 ID : 264330699232

Option 3 ID : 264330699231

Option 4 ID : 264330699234

Status : Answered

Chosen Option : 3

Q.3 Which of the following is the function of an IP address?

- Ans
- 1. Managing email communication
 - 2. Formatting web pages
 - 3. Creating secure connections
 - 4. Identifying devices on a network

Question ID : 264330180665
Option 1 ID : 264330708628
Option 2 ID : 264330708627
Option 3 ID : 264330708630
Option 4 ID : 264330708629
Status : Answered
Chosen Option : 4

Q.4 Bullets and numbering are commonly used in Microsoft Word 365 to:

- Ans
- 1. format text as headings
 - 2. create lists for better organisation
 - 3. italicise the text
 - 4. add borders around paragraphs

Question ID : 264330180703
Option 1 ID : 264330708781
Option 2 ID : 264330708782
Option 3 ID : 264330708779
Option 4 ID : 264330708780
Status : Answered
Chosen Option : 3

Q.5 In MS Word 365 how can you select a paragraph in Microsoft Word?

- Ans
- 1. Double-click anywhere within the paragraph.
 - 2. Right-click anywhere within the paragraph and choose 'Select Paragraph'.
 - 3. Press Ctrl+B to select the entire paragraph.
 - 4. Triple-click anywhere within the paragraph.

Question ID : 264330173586
Option 1 ID : 264330680823
Option 2 ID : 264330680826
Option 3 ID : 264330680825
Option 4 ID : 264330680824
Status : Answered
Chosen Option : 1

Q.6 In MS Excel 365, which of the following is the shortcut key in MS Excel to open a spreadsheet that is already existing?

- Ans
- 1. Ctrl + N
 - 2. Ctrl + O
 - 3. Alt + O
 - 4. Alt + N

Question ID : 264330180399
Option 1 ID : 264330707563
Option 2 ID : 264330707565
Option 3 ID : 264330707564
Option 4 ID : 264330707566
Status : Answered
Chosen Option : 1

Q.7 In MS Excel 365, the shortcut key to open the custom sort is:

- Ans
- 1. Windows Key + A + S
 - 2. Alt + A + S
 - 3. Shift + A + S
 - 4. Ctrl + A + S

Question ID : 264330175957
Option 1 ID : 264330690126
Option 2 ID : 264330690123
Option 3 ID : 264330690124
Option 4 ID : 264330690125
Status : Answered
Chosen Option : 4

Q.8 What is the purpose of attaching files to an email?

- Ans
- 1. To add decorative elements to the email
 - 2. To format the email text
 - 3. To share documents, images or other files with the recipient
 - 4. To increase the size of the email

Question ID : 264330180655
Option 1 ID : 264330708589
Option 2 ID : 264330708588
Option 3 ID : 264330708590
Option 4 ID : 264330708587
Status : Answered
Chosen Option : 3

Q.9 In Microsoft Word 365, how can we apply different page formatting within the same document by separating areas with different formats?

- Ans
- 1. By Page Layout
 - 2. By Insert
 - 3. By Section Break
 - 4. By Page Break

Question ID : 264330182069
Option 1 ID : 264330714117
Option 2 ID : 264330714118
Option 3 ID : 264330714115
Option 4 ID : 264330714116
Status : Answered
Chosen Option : 1

Q.10 एमएस एक्सेल 365 (MS Excel 365) में, स्प्रेडशीट निम्नलिखित में से किस फॉर्मेट में डिफ़ॉल्ट रूप से सेव होती है?

- Ans
- 1. .docx
 - 2. .xls
 - 3. .xlsx
 - 4. .doc

Question ID : 264330175952
Option 1 ID : 264330690106
Option 2 ID : 264330690104
Option 3 ID : 264330690105
Option 4 ID : 264330690103
Status : Answered
Chosen Option : 3

Constable Executive Male and Female in Delhi Police Examination 2023

Roll Number	
Candidate Name	
Venue Name	ION DIGITAL ZONE iDZ 2 WADI MIDC
Exam Date	21/11/2023
Exam Time	12:00 PM - 1:30 PM
Subject	Constable Executive Male and Female in Delhi Police Examination 2023

Section : General Knowledge

Q.1 The IISCO and TISCO industrial plants are related to which industry?

- Ans 1. Sugar
 2. Iron and steel
 3. Textile
 4. Cement

Question ID : 264330178709
Option 1 ID : 264330700864
Option 2 ID : 264330700863
Option 3 ID : 264330700865
Option 4 ID : 264330700866
Status : Answered
Chosen Option : 1

Q.2 Which of the following sports persons is associated with Billiards?

- Ans 1. Homi Motiwala
 2. Nameirakpam Kunjarani
 3. Pushpendra Kumar Garg
 4. Geet Sethi

Question ID : 264330176743
Option 1 ID : 264330693189
Option 2 ID : 264330693190
Option 3 ID : 264330693188
Option 4 ID : 264330693187
Status : Answered
Chosen Option : 4

Q.3 Shree Hanuman Vyayam Prasarak Mandal is situated in ____.

- Ans 1. Nagpur
 2. New Delhi
 3. Amravati
 4. Mumbai

Question ID : 264330110369
Option 1 ID : 264330433755
Option 2 ID : 264330433754
Option 3 ID : 264330433756
Option 4 ID : 264330433753
Status : Not Answered
Chosen Option : --

Q.4 Biome can be defined as:

- Ans 1. an area of desert
2. a large area characterised by its vegetation, soil, climate, and wildlife
3. a restricted area where only selected species can grow
4. an aquatic environment where only fishes can grow

Question ID : 264330120953
Option 1 ID : 264330474029
Option 2 ID : 264330474030
Option 3 ID : 264330474027
Option 4 ID : 264330474028
Status : Answered
Chosen Option : 2

Q.5 Member of Rajya Sabha, Sonal Mansingh is an eminent dancer of _____ and Bharatanatyam.

- Ans 1. Mohiniyattam
2. Odissi
3. Kathakali
4. Kathak

Question ID : 264330111979
Option 1 ID : 264330440001
Option 2 ID : 264330440002
Option 3 ID : 264330440004
Option 4 ID : 264330440003
Status : Answered
Chosen Option : 2

Q.6 The Sangeet Natak Akademi gives fellowships to eminent artists. Sonal Mansingh received it for Odissi which is a dance form of which State?

- Ans 1. Andhra Pradesh
2. Kerala
3. Uttar Pradesh
4. Odisha

Question ID : 26433086667
Option 1 ID : 264330340309
Option 2 ID : 264330340312
Option 3 ID : 264330340310
Option 4 ID : 264330340311
Status : Answered
Chosen Option : 4

Q.7 Which of the following cultural festivals is celebrated by the tribal people of Jharkhand?

- Ans 1. Sohrai
2. Ugadi
3. Sao Joao
4. Hareli

Question ID : 264330132404
Option 1 ID : 264330518713
Option 2 ID : 264330518714
Option 3 ID : 264330518712
Option 4 ID : 264330518711
Status : Answered
Chosen Option : 1

Q.8 'Nation First, Always First' is the theme of _____ Independence Day 2022.

Ans 1. 75th

2. 72nd

3. 77th

4. 70th

Question ID : 264330106211

Option 1 ID : 264330417146

Option 2 ID : 264330417148

Option 3 ID : 264330417145

Option 4 ID : 264330417147

Status : Answered

Chosen Option : 1

Q.9 Chaitya Hall of Maharashtra is an example of _____ .

Ans 1. Islamic architecture

2. Nagara architecture

3. Cave architecture

4. Dravidian architecture

Question ID : 264330106229

Option 1 ID : 264330417218

Option 2 ID : 264330417220

Option 3 ID : 264330417217

Option 4 ID : 264330417219

Status : Answered

Chosen Option : 4

Q.10 What is the name of the scheme which has been rechristened in the year 2018 as Poshan Abhiyaan?

Ans 1. National Nutrition Mission

2. National Mid-Day Meal Scheme

3. Integrated Child Development Scheme

4. Deen Dayal Upadhyaya Antyodaya

Question ID : 264330117989

Option 1 ID : 264330463771

Option 2 ID : 264330463772

Option 3 ID : 264330463774

Option 4 ID : 264330463773

Status : Answered

Chosen Option : 2

Q.11 Rudradaman belonged to which of the following dynasties?

Ans 1. Kushana

2. Maurya

3. Gupta

4. Shaka

Question ID : 264330114816

Option 1 ID : 264330451352

Option 2 ID : 264330451349

Option 3 ID : 264330451350

Option 4 ID : 264330451351

Status : Answered

Chosen Option : 4

Q.12 Vijay Stambh was built by which of these rulers?

- Ans 1. Durga Das Rathore
 2. Maharana Pratap
 3. Rana Kumbha
 4. Prithvi Raj Chauhan

Question ID : 264330109325
Option 1 ID : 264330429580
Option 2 ID : 264330429577
Option 3 ID : 264330429579
Option 4 ID : 264330429578
Status : Answered
Chosen Option : 2

Q.13 Sangeet Natak Akademi award winner Guru Vempati Chinna Satyam was an exponent of _____ .

- Ans 1. Kuchipudi
 2. Bharatanatyam
 3. Mohiniyattam
 4. Kathakali

Question ID : 264330111969
Option 1 ID : 264330439964
Option 2 ID : 264330439962
Option 3 ID : 264330439961
Option 4 ID : 264330439963
Status : Answered
Chosen Option : 1

Q.14 In which year was 'Pradhan Mantri Rozgar Yojana' ('PMRY') launched?

- Ans 1. 1990
 2. 1993
 3. 1999
 4. 2001

Question ID : 264330130602
Option 1 ID : 264330511519
Option 2 ID : 264330511520
Option 3 ID : 264330511521
Option 4 ID : 264330511522
Status : Answered
Chosen Option : 4

Q.15 With which of the following subjects are Article 123 and Article 213 of the Constitution of India associated?

- Ans 1. Annual financial statement
 2. Jurisdiction of Courts
 3. Ordinance-making power
 4. Issuing writs

Question ID : 26433053626
Option 1 ID : 264330209809
Option 2 ID : 264330209806
Option 3 ID : 264330209808
Option 4 ID : 264330209807
Status : Answered
Chosen Option : 3

Q.16 Who among the following female leaders addressed the Indian National Congress session of 1890?

- Ans
- 1. Vina Mazumdar
 - 2. Basanti Devi
 - 3. Nanibala Devi
 - 4. Kadambini Ganguli

Question ID : 264330120260
Option 1 ID : 264330471295
Option 2 ID : 264330471296
Option 3 ID : 264330471297
Option 4 ID : 264330471298
Status : Answered
Chosen Option : 4

Q.17 In which of the following years was the Bandhan Financial Services Private Limited set up to alleviate poverty and women empowerment?

- Ans
- 1. 2002
 - 2. 2004
 - 3. 2001
 - 4. 2003

Question ID : 264330116494
Option 1 ID : 264330458062
Option 2 ID : 264330458064
Option 3 ID : 264330458061
Option 4 ID : 264330458063
Status : Not Answered
Chosen Option : --

Q.18 Who among the following Mughal emperors was taken as the leader by the sepoys and led the revolt of 1857?

- Ans
- 1. Muhammad Shah
 - 2. Shah Jahan II
 - 3. Bahadur Shah Zafar
 - 4. Aurangzeb

Question ID : 264330114088
Option 1 ID : 264330448437
Option 2 ID : 264330448438
Option 3 ID : 264330448439
Option 4 ID : 264330448440
Status : Answered
Chosen Option : 3

Q.19 KV Prasad and SV Rajarao are both associated with which of the following percussion instruments?

- Ans
- 1. Ghatam
 - 2. Kanjira
 - 3. Mridangam
 - 4. Tabla

Question ID : 264330111934
Option 1 ID : 264330439822
Option 2 ID : 264330439823
Option 3 ID : 264330439824
Option 4 ID : 264330439821
Status : Answered
Chosen Option : 1

Q.20 Which of the following is a Private Sector Undertaking of India?

- Ans
- 1. Bhadravati Steel Plant
 - 2. Housing Development Finance Corporation Limited
 - 3. Bengal Chemicals and Pharmaceuticals Limited
 - 4. Alloy Steels Plant

Question ID : 26433092385
Option 1 ID : 264330362831
Option 2 ID : 264330362829
Option 3 ID : 264330362832
Option 4 ID : 264330362830
Status : Not Answered
Chosen Option : --

Q.21 Isobars are defined as:

- Ans
- 1. atoms of the same element having the same neutron number but different atomic numbers
 - 2. atoms of different elements having the same mass number but different atomic numbers
 - 3. atoms of the same element having different atomic numbers and different proton numbers
 - 4. atoms of the same element having the same atomic number but different mass numbers

Question ID : 264330182937
Option 1 ID : 264330717483
Option 2 ID : 264330717481
Option 3 ID : 264330717482
Option 4 ID : 264330717480
Status : Answered
Chosen Option : 2

Q.22 Which of the following was added in the Constitution of India in 1976?

- Ans
- 1. Fundamental rights
 - 2. Right to education
 - 3. Fundamental duty
 - 4. Directive principle

Question ID : 264330118534
Option 1 ID : 264330465539
Option 2 ID : 264330465537
Option 3 ID : 264330465540
Option 4 ID : 264330465538
Status : Answered
Chosen Option : 3

Q.23 Where was the first unit of the Singh Sabha formed in 1873?

- Ans
- 1. Amritsar
 - 2. Karachi
 - 3. Patiala
 - 4. Chandigarh

Question ID : 264330119026
Option 1 ID : 264330466759
Option 2 ID : 264330466761
Option 3 ID : 264330466762
Option 4 ID : 264330466760
Status : Answered
Chosen Option : 1

Q.24 Where is the oldest branch of the Ramakrishna Mission in the United States located?

- Ans
- 1. Texas
 - 2. Chicago
 - 3. Atlanta
 - 4. New York

Question ID : 264330119008
Option 1 ID : 264330466689
Option 2 ID : 264330466690
Option 3 ID : 264330466688
Option 4 ID : 264330466687
Status : Answered
Chosen Option : 2

Q.25 What were cash crops such as cotton and sugarcane called during the Mughal period?

- Ans
- 1. Jins-i-kamil
 - 2. Jins-i-shukr
 - 3. Jins-i-taqh
 - 4. Jins-i-qiblis

Question ID : 264330118988
Option 1 ID : 264330466607
Option 2 ID : 264330466609
Option 3 ID : 264330466610
Option 4 ID : 264330466608
Status : Not Answered
Chosen Option : --

Q.26 निम्नलिखित में से कौन-सा कथन सही है?

- Ans 1. पारिस्थितिक तंत्र में ऊर्जा का प्रवाह एकदिशीय होता है।
 2. ऊर्जा का पिरामिड हमेशा उल्टा होता है।
 3. सभी पारिस्थितिक तंत्र आकार में स्थिर होते हैं।
 4. प्रकृति में, केवल खाद्य श्रृंखलाएँ मौजूद होती हैं, लेकिन खाद्य जाल नहीं।

Question ID : 26433011894

Option 1 ID : 264330439663

Option 2 ID : 264330439664

Option 3 ID : 264330439661

Option 4 ID : 264330439662

Status : Answered

Chosen Option : 1

Q.27 As per Tendulkar Expert Group (2009), for the year 2011-2012, the national poverty line in India for a person was fixed at _____ per month for the urban areas.

- Ans 1. ₹1,500
 2. ₹800
 3. ₹1,000
 4. ₹2,000

Question ID : 264330183050

Option 1 ID : 264330717934

Option 2 ID : 264330717932

Option 3 ID : 264330717933

Option 4 ID : 264330717935

Status : Answered

Chosen Option : 1

Q.28 Which of the following is NOT a quality/feature of the parliamentary form of government?

- Ans 1. Wide representation
 2. Single executive
 3. Collective responsibility
 4. Harmony between legislature and executive

Question ID : 264330120170

Option 1 ID : 264330470935

Option 2 ID : 264330470936

Option 3 ID : 264330470937

Option 4 ID : 264330470938

Status : Answered

Chosen Option : 2

Q.29 The first Khelo India Winter Games was hosted by which of the following places?

- Ans 1. Gulmarg
 2. Ladakh
 3. Leh
 4. Shimla

Question ID : 264330176945

Option 1 ID : 264330693977

Option 2 ID : 264330693976

Option 3 ID : 264330693975

Option 4 ID : 264330693978

Status : Answered

Chosen Option : 1

Q.30 What is the full form of HYV seeds that were essential in the implementation of the green revolution?

- Ans
- 1. Hand Yielding Volume seeds
 - 2. High Yielding Variety seeds
 - 3. High Yeast Variety seeds
 - 4. High Yielding Volume seeds

Question ID : 264330117757
Option 1 ID : 264330462846
Option 2 ID : 264330462843
Option 3 ID : 264330462844
Option 4 ID : 264330462845
Status : Answered
Chosen Option : 2

Q.31 What is the required size of the Olympic swimming pool?

- Ans
- 1. 50 m × 30 m
 - 2. 60 m × 60 m
 - 3. 50 m × 25 m
 - 4. 25 m × 15 m

Question ID : 264330118474
Option 1 ID : 264330465298
Option 2 ID : 264330465299
Option 3 ID : 264330465297
Option 4 ID : 264330465300
Status : Not Answered
Chosen Option : --

Q.32 'Higher Education Leadership Development Programme for Administrator' is a programme launched by which Union Ministry?

- Ans
- 1. Ministry of Human Resource Development
 - 2. Ministry of MSME
 - 3. Ministry of Corporate Affairs
 - 4. Ministry of Skill Development and Entrepreneurship

Question ID : 264330110184
Option 1 ID : 264330433014
Option 2 ID : 264330433016
Option 3 ID : 264330433013
Option 4 ID : 264330433015
Status : Answered
Chosen Option : 4

Q.33 According to Census of India 2011, select the state that had less than 10 crore population?

- Ans
- 1. Maharashtra
 - 2. Uttar Pradesh
 - 3. West Bengal
 - 4. Bihar

Question ID : 264330182976
Option 1 ID : 264330717638
Option 2 ID : 264330717639
Option 3 ID : 264330717636
Option 4 ID : 264330717637
Status : Answered
Chosen Option : 4

Q.34 'The Great Gatsby' is an English novel written by which of the following authors?

- Ans 1. F. Scott Fitzgerald
 2. Oscar Wilde
 3. Ernest Hemingway
 4. D. H. Lawrence

Question ID : 26433055376
Option 1 ID : 264330216490
Option 2 ID : 264330216491
Option 3 ID : 264330216488
Option 4 ID : 264330216489
Status : Not Answered
Chosen Option : --

Q.35 Who can amend any part of the Constitution without affecting the 'basic structure' of the Constitution?

- Ans 1. Judiciary
 2. President
 3. Parliament
 4. Executive

Question ID : 264330173470
Option 1 ID : 264330680360
Option 2 ID : 264330680362
Option 3 ID : 264330680359
Option 4 ID : 264330680361
Status : Answered
Chosen Option : 3

Q.36 Who among the following novelists wrote 'Midnight's Children'?

- Ans 1. Salman Rushdie
 2. Shashi Tharoor
 3. VS Naipaul
 4. Vikram Seth

Question ID : 26433064232
Option 1 ID : 264330251523
Option 2 ID : 264330251521
Option 3 ID : 264330251522
Option 4 ID : 264330251520
Status : Answered
Chosen Option : 1

Q.37 Who among the following was NOT a member of the All India Khilafat Committee, formed by Ali brothers in early 1919?

- Ans 1. Yakub Hasan Sait
 2. Hasrat Mohani
 3. Maulana Abul Kalam Azad
 4. Hakim Ajmal Khan

Question ID : 264330120430
Option 1 ID : 264330471971
Option 2 ID : 264330471973
Option 3 ID : 264330471974
Option 4 ID : 264330471972
Status : Answered
Chosen Option : 3

Q.38 According to India Brand Equity Foundation report (2020-21), which group of states of India is the largest coffee producer?

- Ans
- 1. Tamil Nadu and Kerala
 - 2. Kerala and Andhra Pradesh
 - 3. Karnataka and Tamil Nadu
 - 4. Karnataka and Kerala

Question ID : 264330132712
Option 1 ID : 264330519945
Option 2 ID : 264330519946
Option 3 ID : 264330519943
Option 4 ID : 264330519944
Status : Answered
Chosen Option : 1

Q.39 पंचवर्षीय योजनाओं के वित्तपोषण के संदर्भ में सार्वजनिक क्षेत्र के मुकाबले निजी क्षेत्र के लिए उपलब्ध वित्त के स्रोतों में कौन-सा शामिल नहीं है?

- Ans
- 1. इकिटी पूँजी के रूप में विदेशी फंड
 - 2. व्यक्तियों की बचत
 - 3. कर
 - 4. सार्वजनिक क्षेत्र के वित्तीय संस्थान

Question ID : 264330112476
Option 1 ID : 264330441992
Option 2 ID : 264330441989
Option 3 ID : 264330441991
Option 4 ID : 264330441990
Status : Answered
Chosen Option : 3

Q.40 Which of the following Buddhist texts is based on the conversation between the Buddhist sage Nagasena and Indo Greek king Menander?

- Ans
- 1. Mahavamsa
 - 2. Milindapanha
 - 3. Dhammapada
 - 4. Prajnaparamita

Question ID : 264330183115
Option 1 ID : 264330718194
Option 2 ID : 264330718193
Option 3 ID : 264330718192
Option 4 ID : 264330718195
Status : Answered
Chosen Option : 2

Q.41 As a result of double counting, National Income is:

- Ans
- 1. not estimated for the entire year of accounting
 - 2. over-estimated
 - 3. correctly estimated
 - 4. under-estimated

Question ID : 264330110166
Option 1 ID : 264330432944
Option 2 ID : 264330432942
Option 3 ID : 264330432943
Option 4 ID : 264330432941
Status : Answered
Chosen Option : 2

Q.42 What is a relatively small, triangular-shaped minor oceanic plate located beneath the Pacific Ocean off the west coast of Central America?

- Ans
- 1. Nazca plate
 - 2. Okhotsk plate
 - 3. Cocos plate
 - 4. Sunda plate

Question ID : 264330141737
Option 1 ID : 264330555267
Option 2 ID : 264330555270
Option 3 ID : 264330555269
Option 4 ID : 264330555268
Status : Answered
Chosen Option : 3

Q.43 Mrinalini Sarabhai is associated with which of these dance forms?

- Ans
- 1. Kathak
 - 2. Mohiniyattam
 - 3. Manipuri
 - 4. Kathakali

Question ID : 264330109297
Option 1 ID : 264330429468
Option 2 ID : 264330429465
Option 3 ID : 264330429466
Option 4 ID : 264330429467
Status : Answered
Chosen Option : 4

Q.44 Which of the following statements are correct regarding Fundamental Rights of the Indian Citizen?

- A. Some of the Fundamental Rights are available against the arbitrary action of the state, some of them available against the private people.
- B. Fundamental Rights are not absolute but qualified.
- C. The Parliament can curtail or repeal the Fundamental Rights but without affecting the basic structure of the Indian Constitution.
- D. Under Fundamental Rights, the aggrieved person cannot go to the Supreme Court directly, but they can go to the High Court directly.

- Ans
- 1. A, C and D only
 - 2. B, C and D only
 - 3. A, B and C only
 - 4. A, B, C and D

Question ID : 264330114757
Option 1 ID : 264330451116
Option 2 ID : 264330451115
Option 3 ID : 264330451114
Option 4 ID : 264330451113
Status : Answered
Chosen Option : 3

Q.45 What types of proteins reside within the bilayer membrane that surrounds cells and organelles, and play an important role in the movement of molecules across them and the transmission of energy and signals?

- Ans
- 1. Carrier proteins
 - 2. Peripheral membrane proteins
 - 3. Integral membrane proteins
 - 4. Glycoproteins

Question ID : 264330114599
Option 1 ID : 264330450484
Option 2 ID : 264330450483
Option 3 ID : 264330450481
Option 4 ID : 264330450482
Status : Answered
Chosen Option : 2

Q.46 Which Article of the Constitution of India deals with the ordinance making power of the Governor?

- Ans
- 1. Article 209
 - 2. Article 205
 - 3. Article 213
 - 4. Article 203

Question ID : 264330177772
Option 1 ID : 264330697197
Option 2 ID : 264330697196
Option 3 ID : 264330697198
Option 4 ID : 264330697195
Status : Answered
Chosen Option : 3

Q.47 Consider following statements.

- 1) A system consisting of biotic and abiotic components is known as ecosystem. .
 - 2) All the components of the ecosystem are inter-related.
 - 3) Ecosystem always have clear boundaries.
- Which statement is/are correct?

- Ans
- 1. Both 1 and 2 statements are correct.
 - 2. Both 1 and 3 statements are correct.
 - 3. All the statements are correct.
 - 4. Both 2 and 3 statements are correct.

Question ID : 264330118516
Option 1 ID : 264330465465
Option 2 ID : 264330465467
Option 3 ID : 264330465468
Option 4 ID : 264330465466
Status : Answered
Chosen Option : 1

Q.48 Which of the following Directive Principles of State Policy of the Indian Constitution falls under socialistic principles?

- Ans**
- 1. To protect and improve the environment and to safeguard forests and wildlife
 - 2. To prohibit the consumption of intoxicating drinks and drugs
 - 3. Equal pay for equal work for men and women
 - 4. To promote functioning of co-operative societies

Question ID : 264330113406
Option 1 ID : 264330445709
Option 2 ID : 264330445711
Option 3 ID : 264330445710
Option 4 ID : 264330445712
Status : Answered
Chosen Option : 4

Q.49 Which of the following is NOT a factor that causes rainfall in India?

- Ans**
- 1. Anti-cyclone
 - 2. Convention
 - 3. Cyclone
 - 4. Orography

Question ID : 264330179013
Option 1 ID : 264330702056
Option 2 ID : 264330702057
Option 3 ID : 264330702055
Option 4 ID : 264330702058
Status : Answered
Chosen Option : 4

Q.50 Vilayat Khan is known for playing which of the following instruments?

- Ans**
- 1. Santoor
 - 2. Sarod
 - 3. Violin
 - 4. Sitar

Question ID : 264330111931
Option 1 ID : 264330439812
Option 2 ID : 264330439810
Option 3 ID : 264330439809
Option 4 ID : 264330439811
Status : Answered
Chosen Option : 2

Section : Reasoning

Q.1 Which of the following terms will replace the question mark (?) in the given series?
CJLR, DINP, ?, FGRL, GFTJ

- Ans
- 1. EJPO
 - 2. EHON
 - 3. EHPN
 - 4. EIPN

Question ID : 264330102170
Option 1 ID : 264330401148
Option 2 ID : 264330401146
Option 3 ID : 264330401147
Option 4 ID : 264330401145
Status : Answered
Chosen Option : 3

Q.2 Select the number from among the given options that can replace the question mark (?) in the following series.
21, 30, 23, 32, 25, ?

- Ans
- 1. 36
 - 2. 34
 - 3. 37
 - 4. 38

Question ID : 264330111626
Option 1 ID : 264330438589
Option 2 ID : 264330438590
Option 3 ID : 264330438591
Option 4 ID : 264330438592
Status : Answered
Chosen Option : 2


Q.3 Select the option that is related to the fifth letter cluster in the same way as the second letter cluster is related to the first letter cluster and the fourth letter cluster is related to the third letter cluster.
PENG : LIJK :: MONG : ISJK :: FTCH : ?

- Ans
- 1. BXYL
 - 2. VDAG
 - 3. JKRI
 - 4. AIEB

Question ID : 26433074687
Option 1 ID : 264330292836
Option 2 ID : 264330292838
Option 3 ID : 264330292837
Option 4 ID : 264330292839
Status : Answered
Chosen Option : 1

Q.4

Select the figure that will replace the question mark (?) in the following figure series.



Ans

- 1.
- 2.
- 3.
- 4.

Question ID : 264330108957

Option 1 ID : 264330428105

Option 2 ID : 264330428108

Option 3 ID : 264330428106

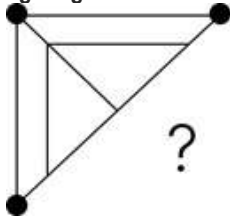
Option 4 ID : 264330428107

Status : Answered

Chosen Option : 4

Adda247

Q.5 Select the figure from the given options that will replace the question mark (?) in the figure given below to complete the pattern so that the final image is symmetrical.

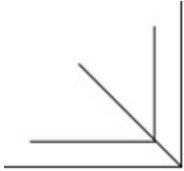


Ans

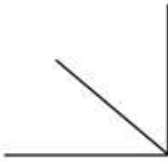
1.



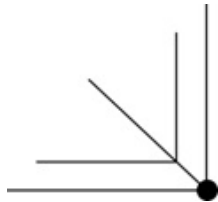
2.



3.



4.



Question ID : 264330114727

Option 1 ID : 264330450993

Option 2 ID : 264330450994

Option 3 ID : 264330450996

Option 4 ID : 264330450995

Status : Answered

Chosen Option : 4

Q.6 How many triangles are there in the given figure?



- Ans
- 1. 6
 - 2. 8
 - 3. 9
 - 4. 10

Question ID : 26433091710

Option 1 ID : 264330360206

Option 2 ID : 264330360205

Option 3 ID : 264330360208

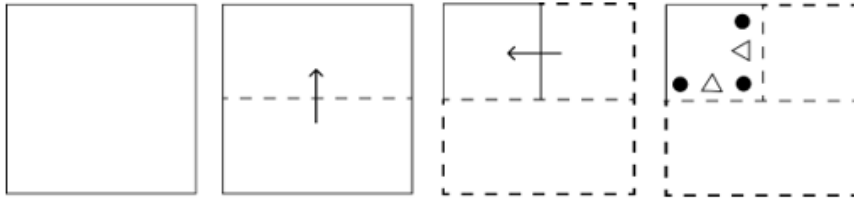
Option 4 ID : 264330360207

Status : Answered

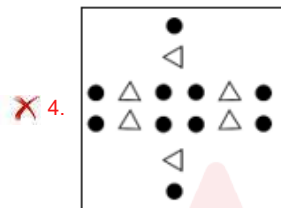
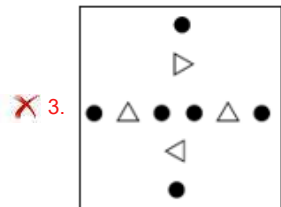
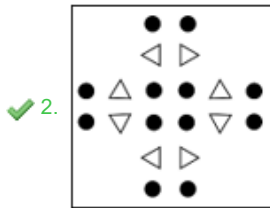
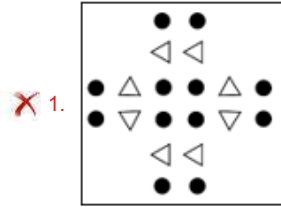
Chosen Option : 4

Adda247

Q.7 A square sheet of paper is folded along the dotted line successively along the directions shown and is then punched in the last. How would the paper look when unfolded?



Ans



Question ID : 264330172417

Option 1 ID : 264330676220

Option 2 ID : 264330676221

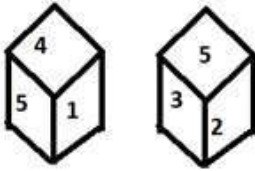
Option 3 ID : 264330676219

Option 4 ID : 264330676222

Status : Answered

Chosen Option : 2

Q.8 Six numbers 1, 2, 3, 4, 5 and 6 are written on different faces of a dice. Two positions of this dice are shown in the figure. Find the number on the face opposite to 3.



- Ans
- 1. 6
 - 2. 4
 - 3. 2
 - 4. 1

Question ID : 264330117906
 Option 1 ID : 264330463441
 Option 2 ID : 264330463442
 Option 3 ID : 264330463440
 Option 4 ID : 264330463439
 Status : Answered
 Chosen Option : 4

Q.9 Which figure should replace the question mark (?) if the following series were to be continued?

V	X	9	V	V	↑	2	V	V	X	
↑	2	9	2	↑	X	X	9	2	9	X
										?

- Ans
- 1.

X	2
9	↑
 - 2.

X	9
V	2
 - 3.

9	V
2	X
 - 4.

↑	V
2	X

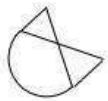
Question ID : 264330103883
 Option 1 ID : 264330407834
 Option 2 ID : 264330407836
 Option 3 ID : 264330407833
 Option 4 ID : 264330407835
 Status : Answered
 Chosen Option : 3

Q.10 Select the option that is related to the third term in the same way as the second term is related to the first term and the sixth term is related to the fifth term.
4 : 12 :: 8 : ? :: 10 : 24

- Ans
- 1. 22
 - 2. 16
 - 3. 24
 - 4. 20

Question ID : 264330101048
Option 1 ID : 264330396738
Option 2 ID : 264330396737
Option 3 ID : 264330396740
Option 4 ID : 264330396739
Status : Answered
Chosen Option : 4

Q.11 Select the option in which given figure is embedded. (Rotation is not allowed.)



Ans

- 1.
- 2.
- 3.
- 4.

Question ID : 264330112592
Option 1 ID : 264330442455
Option 2 ID : 264330442454
Option 3 ID : 264330442453
Option 4 ID : 264330442456
Status : Answered
Chosen Option : 1

Q.12 Select the correct combination of mathematical signs that can sequentially replace the * signs and balance the given equation.
 $17*3*6*45$

Ans 1. $\times, -, =$

2. $+, -, =$

3. $-, =, +$

4. $\times, +, =$

Question ID : 26433079096

Option 1 ID : 264330310388

Option 2 ID : 264330310389

Option 3 ID : 264330310390

Option 4 ID : 264330310391

Status : Answered

Chosen Option : 1

Q.13 J, K, L, M, N and O are sitting around a circular table facing the centre. Only two people sit between J and O. Only one person sits between O and N. Only two people sit between N and M. K sits to the immediate right of N. Who is sitting to the immediate left of L?

Ans 1. M

2. O

3. N

4. K

Question ID : 264330104450

Option 1 ID : 264330410101

Option 2 ID : 264330410104

Option 3 ID : 264330410103

Option 4 ID : 264330410102

Status : Answered

Chosen Option : 1

Adda247

Q.14 Which figure should replace the question mark (?) if the following series were to be continued?

B	O	Z	T	B	Z	L	T	B	L	
	L		O		D		Z		S	?
Z		T	B	L	L	T	B	D	D	T

Ans

✗ 1.

D	B
	S
T	L

✓ 2.

D	T
	L
B	S

✗ 3.

D	S
	T
B	L

✗ 4.

D	T
	B
S	L

Question ID : 264330103887

Option 1 ID : 264330407849

Option 2 ID : 264330407852

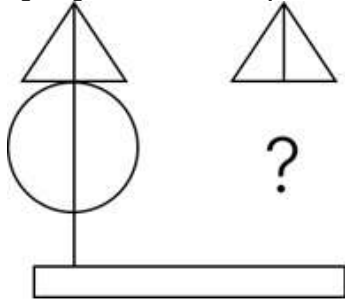
Option 3 ID : 264330407851

Option 4 ID : 264330407850

Status : Answered

Chosen Option : 2

Q.15 Select the figure from the given options that will replace the question mark (?) in the figure given below to complete the pattern so that the final image is symmetrical.



Ans

- 1.
- 2.
- 3.
- 4.

Question ID : 264330114737

Option 1 ID : 264330451035

Option 2 ID : 264330451033

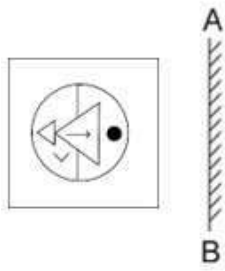
Option 3 ID : 264330451034

Option 4 ID : 264330451036

Status : Answered

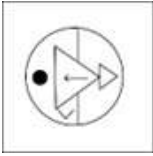
Chosen Option : 3

Q.16 Select the correct mirror image of the given figure when the mirror is placed at 'AB' as shown.

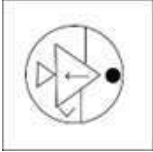


Ans

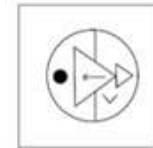
1.



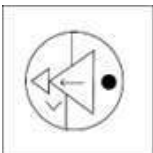
2.



3.



4.



Question ID : 264330118174

Option 1 ID : 264330464513

Option 2 ID : 264330464512

Option 3 ID : 264330464514

Option 4 ID : 264330464511

Status : Answered

Chosen Option : 3

Q.17 Two statements are given followed by two conclusions numbered I and II. Assuming the statements to be true, even if they seem to be at variance from commonly known facts, decide which of the conclusions logically follow(s) from the statements.

Statements:

Some Fans are Round.

Some Round are Circles.

Conclusions:

I. All Fans are Circles.

II. All Circles are Round.

Ans

1. Only conclusion I follows.

2. Neither conclusion I nor II follows.

3. Both conclusions I and II follow.

4. Only conclusion II follows.

Question ID : 26433076594

Option 1 ID : 264330300440

Option 2 ID : 264330300443

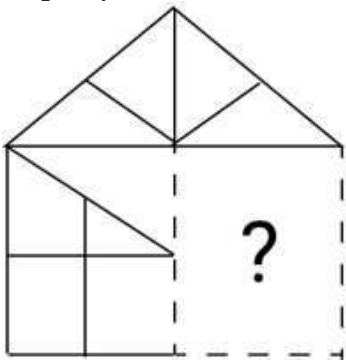
Option 3 ID : 264330300442

Option 4 ID : 264330300441

Status : Answered

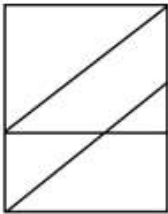
Chosen Option : 2

Q.18 Select the figure from the options that can replace the question mark (?) and complete the given pattern.

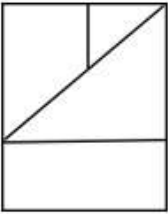


Ans

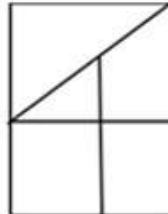
✗ 1.



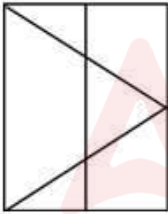
✗ 2.



✓ 3.



✗ 4.



Question ID : 264330106474

Option 1 ID : 264330418197

Option 2 ID : 264330418200

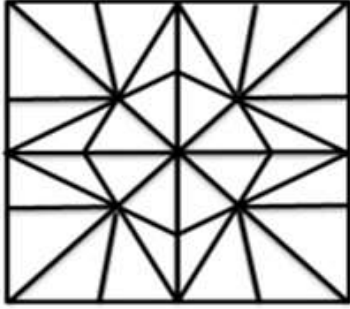
Option 3 ID : 264330418198

Option 4 ID : 264330418199

Status : Answered

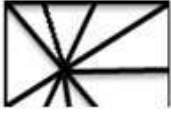
Chosen Option : 3

Q.19 Select the option figure that is embedded in the given figure. (Rotation is not allowed).

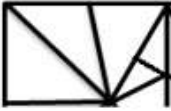


Ans

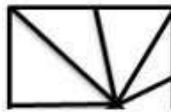
1.



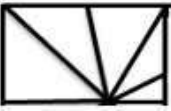
2.



3.



4.



Question ID : 264330114399

Option 1 ID : 264330449684

Option 2 ID : 264330449683

Option 3 ID : 264330449681

Option 4 ID : 264330449682

Status : Answered

Chosen Option : 3

Q.20 Select the set in which the numbers are NOT related in the same way as are the numbers of the following sets.

(192, 12, 10), (195, 15, 7)

(NOTE: Operations should be performed on the whole numbers, without breaking down the numbers into its constituent digits.)

Ans

1. (208, 13, 16)

2. (189, 9, 15)

3. (228, 12, 13)

4. (128, 8, 10)

Question ID : 26433097242

Option 1 ID : 264330381667

Option 2 ID : 264330381668

Option 3 ID : 264330381666

Option 4 ID : 264330381665

Status : Answered

Chosen Option : 1

Q.21 Which of the following option figures will complete the pattern in the figure given below?



Ans

✓ 1.



✗ 2.



✗ 3.



✗ 4.



Question ID : 26433080620

Option 1 ID : 264330316414

Option 2 ID : 264330316415

Option 3 ID : 264330316413

Option 4 ID : 264330316416

Status : Answered

Chosen Option : 1

Q.22 If 'A' denotes '+', 'B' denotes '×', 'C' denotes '-' and 'D' denotes '÷', then what will come in place of '?' in the following equation?
(35 A 7 B 2) D 7 C (14 D 2 C 6) A 6 = ?

Ans ✗ 1. 0

✗ 2. 15

✓ 3. 12

✗ 4. 1

Question ID : 26433082472

Option 1 ID : 264330323724

Option 2 ID : 264330323721

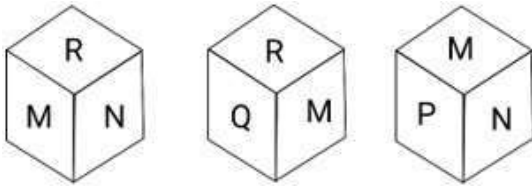
Option 3 ID : 264330323723

Option 4 ID : 264330323722

Status : Answered

Chosen Option : 3

Q.23 Six letters, M, N, O, P, Q and R are written on different faces of a dice. Three positions of this dice are shown here. Find the letter on the face opposite M.



- Ans
- 1. R
 - 2. N
 - 3. O
 - 4. Q

Question ID : 264330106402
Option 1 ID : 264330417912
Option 2 ID : 264330417909
Option 3 ID : 264330417910
Option 4 ID : 264330417911
Status : Answered
Chosen Option : 3

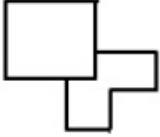
Q.24 In a certain code language, 'BABY' is written as '43427' and 'CREW' is written as '520725'. How will 'DATE' be written in that language?

- Ans
- 1. 63227
 - 2. 62206
 - 3. 53215
 - 4. 41205

Question ID : 26433089412
Option 1 ID : 264330351152
Option 2 ID : 264330351149
Option 3 ID : 264330351150
Option 4 ID : 264330351151
Status : Answered
Chosen Option : 1

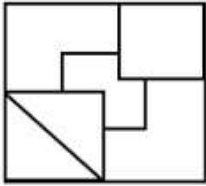
Adda247

Q.25 Select the option in which the given figure is embedded (rotation is NOT allowed).

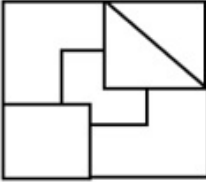


Ans

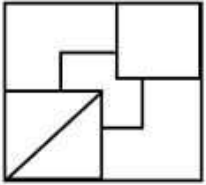
✗ 1.



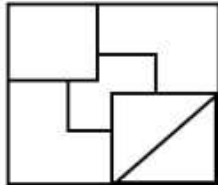
✗ 2.



✗ 3.



✓ 4.



Question ID : 264330106334

Option 1 ID : 264330417638

Option 2 ID : 264330417639

Option 3 ID : 264330417637

Option 4 ID : 264330417640

Status : Answered

Chosen Option : 4

Section : Numerical Ability

Q.1 A sum on compound interest at a certain rate becomes ₹9,680 in 2 years and ₹11,712.80 in 4 years. What is the rate of interest?

Ans ✗ 1. 20%

✓ 2. 10%

✗ 3. 40%

✗ 4. 30%

Question ID : 264330104522

Option 1 ID : 264330410389

Option 2 ID : 264330410392

Option 3 ID : 264330410391

Option 4 ID : 264330410390

Status : Answered

Chosen Option : 2

Q.2 Find the average of all the odd numbers from 1 to 43.

- Ans 1. 21
 2. 23
 3. 25
 4. 22

Question ID : 264330119188
Option 1 ID : 264330467039
Option 2 ID : 264330467041
Option 3 ID : 264330467042
Option 4 ID : 264330467040
Status : Answered
Chosen Option : 4

Q.3 A and B working separately can mow a field in 12 and 10 hours, respectively. They work alternately, each for 1 hour, beginning with A, at 5:00 a.m. At what time will the mowing be completed?

- Ans 1. 4:30 p.m.
 2. 5:30 p.m.
 3. 4:00 p.m.
 4. 5:00 p.m.

Question ID : 264330104208
Option 1 ID : 264330409134
Option 2 ID : 264330409136
Option 3 ID : 264330409133
Option 4 ID : 264330409135
Status : Answered
Chosen Option : 3

Q.4 A salesman earns a 2% of return on $\frac{1}{4}$ of his capital, 4% on $\frac{1}{2}$ of capital and 10% on the remaining. Find the average rate of return he earned on his capital.

- Ans 1. 15%
 2. 10%
 3. 20%
 4. 5%

Question ID : 264330130381
Option 1 ID : 264330510638
Option 2 ID : 264330510636
Option 3 ID : 264330510635
Option 4 ID : 264330510637
Status : Answered
Chosen Option : 3

Q.5 What is the area (in cm^2) of a triangle whose sides are 3 cm, 4 cm, and 5 cm?

- Ans
- 1. 10.5
 - 2. 4
 - 3. 8
 - 4. 6

Question ID : 264330130035

Option 1 ID : 264330509373

Option 2 ID : 264330509374

Option 3 ID : 264330509372

Option 4 ID : 264330509371

Status : Answered

Chosen Option : 4

Q.6 If the radius of the base of a right circular cylinder is increased by 20% and the height is decreased by 30%, then what is the percentage increase/decrease in the volume?

- Ans
- 1. Increase by 0.8%
 - 2. Decrease by 0.8%
 - 3. Decrease by 0.5%
 - 4. Increase by 0.5%

Question ID : 264330103658

Option 1 ID : 264330406938

Option 2 ID : 264330406940

Option 3 ID : 264330406937

Option 4 ID : 264330406939

Status : Answered

Chosen Option : 1

Q.7 If the simple interest on ₹800 for 4 years and on ₹600 for 2 years combined together is ₹280, then what is the rate of interest per annum?

- Ans
- 1. $7\frac{3}{11}\%$
 - 2. $6\frac{4}{11}\%$
 - 3. $3\frac{3}{11}\%$
 - 4. $5\frac{3}{11}\%$

Question ID : 264330119339

Option 1 ID : 264330467645

Option 2 ID : 264330467644

Option 3 ID : 264330467646

Option 4 ID : 264330467643

Status : Answered

Chosen Option : 2

Q.8 In the descending order arrangement of the given terms, which term will come exactly in the middle?

$$\frac{7}{8}, \frac{6}{7}, \frac{11}{13}, \frac{17}{20}, \frac{23}{25}$$

Ans

1. $\frac{11}{13}$

2. $\frac{17}{20}$

3. $\frac{6}{7}$

4. $\frac{7}{8}$

Question ID : 264330126121

Option 1 ID : 264330494157

Option 2 ID : 264330494158

Option 3 ID : 264330494156

Option 4 ID : 264330494159

Status : Answered

Chosen Option : 3

Q.9 The marked price of a chair was ₹1,200. This price was 20% above its cost price. If the chair was sold at a discount of 5% on the marked price, then find the profit percentage.

Ans 1. 12%

2. 11%

3. 16%

4. 14%

Question ID : 264330118073

Option 1 ID : 264330464109

Option 2 ID : 264330464108

Option 3 ID : 264330464107

Option 4 ID : 264330464110

Status : Answered

Chosen Option : 4

Q.10 In a race of 150 m, R beats S by 9 m. If S takes a head start of 15 m, how long (in m) should the race be to have a tie between them?

Ans 1. 210

2. 250

3. 180

4. 270

Question ID : 264330167760

Option 1 ID : 264330657996

Option 2 ID : 264330657997

Option 3 ID : 264330657995

Option 4 ID : 264330657998

Status : Answered

Chosen Option : 2

Q.11 What is the largest number that can exactly divide 48, 92 and 140?

Ans 1. 4

2. 12

3. 11

4. 14

Question ID : 264330118194

Option 1 ID : 264330464591

Option 2 ID : 264330464593

Option 3 ID : 264330464594

Option 4 ID : 264330464592

Status : Answered

Chosen Option : 1

Q.12 If David purchases 10 bananas for ₹25 and sells 9 bananas for ₹45, then what is the gain percentage?

Ans 1. 60%

2. 100%

3. 87%

4. 65%

Question ID : 264330104350

Option 1 ID : 264330409701

Option 2 ID : 264330409704

Option 3 ID : 264330409703

Option 4 ID : 264330409702

Status : Answered

Chosen Option : 2

Q.13 The HCF of 448 and 336 is _____ times the HCF of 48 and 36.

Ans 1. $\frac{29}{3}$

2. 9

3. $\frac{31}{3}$

4. $\frac{28}{3}$

Question ID : 264330112057

Option 1 ID : 264330440314

Option 2 ID : 264330440316

Option 3 ID : 264330440315

Option 4 ID : 264330440313

Status : Answered

Chosen Option : 4

Q.14 What is the cost (in ₹) required to paint a basketball having a diameter of 14 cm, if the painting

cost of the basketball is ₹2.5/cm²? (take $\pi = \frac{22}{7}$)

- Ans
- 1. 3593
 - 2. 1540
 - 3. 385
 - 4. 6160

Question ID : 264330168973
Option 1 ID : 264330662696
Option 2 ID : 264330662698
Option 3 ID : 264330662695
Option 4 ID : 264330662697
Status : Answered
Chosen Option : 2

Q.15 The sum of the digits of the LCM of the numbers 30, 48, 96, 150 is:

- Ans
- 1. 12
 - 2. 14
 - 3. 6
 - 4. 8

Question ID : 264330103683
Option 1 ID : 264330407037
Option 2 ID : 264330407040
Option 3 ID : 264330407039
Option 4 ID : 264330407038
Status : Answered
Chosen Option : 3

Section : Computer Proficiency

Q.1 In most word processors, which of the following keyboard shortcuts is used to bold, italicize, and underline the text, respectively?

- Ans
- 1. Ctrl + B, Ctrl + X, Ctrl + V
 - 2. Ctrl + A, Ctrl + B, Ctrl + C
 - 3. Ctrl + P, Ctrl + V, Ctrl + U
 - 4. Ctrl + B, Ctrl + I, Ctrl + U

Question ID : 264330175972
Option 1 ID : 264330690184
Option 2 ID : 264330690183
Option 3 ID : 264330690186
Option 4 ID : 264330690185
Status : Answered
Chosen Option : 4

Q.2 Which option allows you to increase the size of selected text in Microsoft Word 365?

- Ans 1. Underline
 2. Font Size
 3. Bold
 4. Italic

Question ID : 264330180735
Option 1 ID : 264330708909
Option 2 ID : 264330708910
Option 3 ID : 264330708907
Option 4 ID : 264330708908
Status : Answered
Chosen Option : 2

Q.3 In MS Excel 365 which of the following shortcut keys is used to select entire workbook in MS Excel?

- Ans 1. Ctrl + A
 2. F1
 3. Ctrl + S
 4. F6

Question ID : 264330180402
Option 1 ID : 264330707575
Option 2 ID : 264330707578
Option 3 ID : 264330707577
Option 4 ID : 264330707576
Status : Answered
Chosen Option : 4

Q.4 What is the purpose of a URL (Uniform Resource Locator)?

- Ans 1. To format text on websites
 2. To manage user accounts on websites
 3. To provide the address of a web resource
 4. To create animations on websites

Question ID : 264330180677
Option 1 ID : 264330708676
Option 2 ID : 264330708678
Option 3 ID : 264330708677
Option 4 ID : 264330708675
Status : Answered
Chosen Option : 3

Q.5 In MS-Word 365, which of the following actions is a part of the document creation process?

- Ans 1. Printing the document
 2. Applying formatting to the text
 3. Inserting a table of contents
 4. Saving the document with a new name

Question ID : 264330178092
Option 1 ID : 264330698434
Option 2 ID : 264330698431
Option 3 ID : 264330698433
Option 4 ID : 264330698432
Status : Answered
Chosen Option : 2

Q.6 Which of the following options is used while printing documents in MS Word 365, i.e. if we want to print all the pages from 7 till 10, then the printer should print only the 7th, 8th, 9th and 10th pages?

- Ans**
- 1. Print one sided
 - 2. Collated
 - 3. Print Custom Range
 - 4. Orientation

Question ID : 264330178601
Option 1 ID : 264330700431
Option 2 ID : 264330700432
Option 3 ID : 264330700433
Option 4 ID : 264330700434
Status : Answered
Chosen Option : 3

Q.7 Which of the following statements related to Assigning a Label to an email is INCORRECT?

- Ans**
- 1. We cannot use label in email to sort our inbox.
 - 2. Assigning a label to an email is the equivalent of moving it into a specific folder.
 - 3. We can use labels in email to sort our inbox.
 - 4. We can apply multiple labels to a single email.

Question ID : 264330180390
Option 1 ID : 264330707530
Option 2 ID : 264330707527
Option 3 ID : 264330707528
Option 4 ID : 264330707529
Status : Answered
Chosen Option : 1

Q.8 The keyboard shortcut key used to print preview in MS-Word 365 is:

- Ans**
- 1. Ctrl + F2
 - 2. Shift + F1
 - 3. Ctrl + F1
 - 4. Shift + F2

Question ID : 264330175979
Option 1 ID : 264330690212
Option 2 ID : 264330690213
Option 3 ID : 264330690211
Option 4 ID : 264330690214
Status : Answered
Chosen Option : 3

Q.9 In MS Excel 365 which of the following is one of the options to edit cells in MS-Excel?

- Ans**
- 1. Edit bar
 - 2. Formula bar
 - 3. Space bar
 - 4. Ribbon

Question ID : 264330178264

Option 1 ID : 264330699114

Option 2 ID : 264330699111

Option 3 ID : 264330699112

Option 4 ID : 264330699113

Status : Answered

Chosen Option : 1

Q.10 In MS Excel 365 which tab on the Microsoft Excel ribbon allows you to access options related to opening and saving files?

- Ans**
- 1. View
 - 2. Insert
 - 3. File
 - 4. Home

Question ID : 264330180680

Option 1 ID : 264330708690

Option 2 ID : 264330708688

Option 3 ID : 264330708689

Option 4 ID : 264330708687

Status : Answered

Chosen Option : 3

Adda247

Constable Executive Male and Female in Delhi Police Examination 2023

Roll Number	
Candidate Name	
Venue Name	BR Online Services
Exam Date	21/11/2023
Exam Time	3:00 PM - 4:30 PM
Subject	Constable Executive Male and Female in Delhi Police Examination 2023

Section : General Knowledge

Q.1 Pandit Birju Maharaj, Padma Bhushan awardee, was a globally renowned dancer of which of the following gharanas of Kathak?

- Ans
- 1. Kalka-Bindadin
 - 2. Raigarh
 - 3. Janaki Prasad
 - 4. Jaipur

Question ID : 26433071518
Option 1 ID : 264330280498
Option 2 ID : 264330280496
Option 3 ID : 264330280499
Option 4 ID : 264330280497
Status : Answered
Chosen Option : 4

Q.2 In which of the following cases is a member of the State Legislature NOT required to vacate his/her seat?

- Ans
- 1. Disqualification
 - 2. Double membership
 - 3. Absence for a week without permission
 - 4. Resignation

Question ID : 264330173544
Option 1 ID : 264330680656
Option 2 ID : 264330680655
Option 3 ID : 264330680657
Option 4 ID : 264330680658
Status : Answered
Chosen Option : 2

Q.3 Name the monument constructed by Akbar in 1575 to celebrate his victory over Gujarat.

- Ans
- 1. Jama Masjid
 - 2. Buland Darwaja
 - 3. Sheikh Salim Chisti Dargah
 - 4. Panch Mahal

Question ID : 264330113800
Option 1 ID : 264330447286
Option 2 ID : 264330447285
Option 3 ID : 264330447287
Option 4 ID : 264330447288
Status : Marked For Review
Chosen Option : 2

Q.4 What does 'E' stand for in SEBI?

- Ans
- 1. Electronic
 - 2. Electronically
 - 3. Exchange
 - 4. Energy

Question ID : 26433059325
Option 1 ID : 264330232177
Option 2 ID : 264330232179
Option 3 ID : 264330232176
Option 4 ID : 264330232178
Status : Answered
Chosen Option : 3

Q.5 Pandit Bhimsen Joshi is associated with the _____.

- Ans
- 1. Banaras gharana
 - 2. Patiala gharana
 - 3. Agra gharana
 - 4. Kirana gharana

Question ID : 264330116418
Option 1 ID : 264330457759
Option 2 ID : 264330457757
Option 3 ID : 264330457758
Option 4 ID : 264330457760
Status : Marked For Review
Chosen Option : 2

Q.6 The 'Kachin Manaw Festival' is associated with which of the following countries?

- Ans
- 1. Maldives
 - 2. Myanmar
 - 3. Sri Lanka
 - 4. Pakistan

Question ID : 264330119829
Option 1 ID : 264330469594
Option 2 ID : 264330469591
Option 3 ID : 264330469592
Option 4 ID : 264330469593
Status : Marked For Review
Chosen Option : 2

Q.7 Which of the following is NOT a primary objective of the Special Economic Zone?

- Ans
- 1. Development of infrastructure
 - 2. Providing employment
 - 3. Promoting export
 - 4. Promoting clean technology

Question ID : 264330109407
Option 1 ID : 264330429908
Option 2 ID : 264330429906
Option 3 ID : 264330429905
Option 4 ID : 264330429907
Status : Answered
Chosen Option : 2

Q.8 Gurmeet Bawa, who received the Padma Bhushan posthumously in 2022, hails from which of the following states?

- Ans
- 1. Uttarakhand
 - 2. Maharashtra
 - 3. Punjab
 - 4. Haryana

Question ID : 264330111953
Option 1 ID : 264330439900
Option 2 ID : 264330439899
Option 3 ID : 264330439898
Option 4 ID : 264330439897
Status : Answered
Chosen Option : 3

Q.9 Which weather phenomenon is defined as the movement of large-scale winds around a central region of high atmospheric pressure?

- Ans
- 1. Tropical cyclone
 - 2. Extratropical cyclone
 - 3. Polar cyclone
 - 4. Anticyclone

Question ID : 264330131011
Option 1 ID : 264330513155
Option 2 ID : 264330513157
Option 3 ID : 264330513158
Option 4 ID : 264330513156
Status : Answered
Chosen Option : 3

Q.10 Which of the following Acts created a unified administration system for India?

- Ans
- 1. Pitt's India Act of 1784
 - 2. Regulating Act of 1793
 - 3. Regulating Act of 1813
 - 4. Regulating Act of 1773

Question ID : 264330114852
Option 1 ID : 264330451495
Option 2 ID : 264330451494
Option 3 ID : 264330451496
Option 4 ID : 264330451493
Status : Not Answered
Chosen Option : --

Q.11 Meenakshisundaram Pillai, a dance guru from the village of Pandanallur, was famous for which of the following dance forms?

- Ans
- 1. Mohiniyattam
 - 2. Odissi
 - 3. Bharatnatyam
 - 4. Kathak

Question ID : 264330110442
Option 1 ID : 264330434048
Option 2 ID : 264330434046
Option 3 ID : 264330434045
Option 4 ID : 264330434047
Status : Answered
Chosen Option : 1

Q.12 Which of the following forts is located in Goa?

- Ans 1. Jaigarh Fort
 2. Bekal Fort
 3. Fort Aguada
 4. Chandragiri Fort

Question ID : 264330109645
Option 1 ID : 264330430857
Option 2 ID : 264330430859
Option 3 ID : 264330430860
Option 4 ID : 264330430858
Status : Answered
Chosen Option : 3

Q.13 'Lone Fox Dancing' is an autobiography by which of the following novelists?

- Ans 1. Arvind Adiga
 2. Amitav Ghosh
 3. Ruskin Bond
 4. Khushwant Singh

Question ID : 26433055360
Option 1 ID : 264330216426
Option 2 ID : 264330216427
Option 3 ID : 264330216425
Option 4 ID : 264330216424
Status : Answered
Chosen Option : 1

Q.14 Which of the following is needed for the formation of haemoglobin?

- Ans 1. Cu
 2. P
 3. Fe
 4. Ca

Question ID : 264330120065
Option 1 ID : 264330470517
Option 2 ID : 264330470516
Option 3 ID : 264330470515
Option 4 ID : 264330470518
Status : Answered
Chosen Option : 3

Q.15 In which of the following years did the badminton player PV Sindhu win the Olympics Medal?

- Ans 1. 2004 and 2008
 2. 2008 and 2012
 3. 2012 and 2020
 4. 2016 and 2020

Question ID : 264330118462
Option 1 ID : 264330465250
Option 2 ID : 264330465252
Option 3 ID : 264330465251
Option 4 ID : 264330465249
Status : Answered
Chosen Option : 4

Q.16 Article 32 of the Constitution of India deals with _____ .

- Ans
- 1. the Right to Freedom and Religion
 - 2. the Right to Constitutional Remedies
 - 3. Cultural and Educational Rights
 - 4. the Right to Freedom

Question ID : 264330116393
Option 1 ID : 264330457657
Option 2 ID : 264330457660
Option 3 ID : 264330457659
Option 4 ID : 264330457658
Status : Answered
Chosen Option : 2

Q.17 Where was the Prarthana Samaj established in the 1860s?

- Ans
- 1. Maharashtra
 - 2. Bengal
 - 3. United Provinces
 - 4. Madras

Question ID : 264330119027
Option 1 ID : 264330466763
Option 2 ID : 264330466764
Option 3 ID : 264330466765
Option 4 ID : 264330466766
Status : Answered
Chosen Option : 1

Q.18 Football 2027 Asian Cup will be hosted by _____ .

- Ans
- 1. Bangladesh
 - 2. India
 - 3. Saudi Arabia
 - 4. Japan

Question ID : 264330132538
Option 1 ID : 264330519250
Option 2 ID : 264330519248
Option 3 ID : 264330519247
Option 4 ID : 264330519249
Status : Answered
Chosen Option : 2

Q.19 Where did Dadabhai Naoroji establish the East India Company Association?

- Ans
- 1. Paris
 - 2. Delhi
 - 3. Lucknow
 - 4. London

Question ID : 264330114047
Option 1 ID : 264330448276
Option 2 ID : 264330448273
Option 3 ID : 264330448275
Option 4 ID : 264330448274
Status : Marked For Review
Chosen Option : 4

Q.20 Which of the following Articles of the Constitution of India lays down that it is our duty to defend the country and render national service when called upon to do so?

- Ans
- 1. Article 51 A (d)
 - 2. Article 51 A (g)
 - 3. Article 51 A (e)
 - 4. Article 51 A (f)

Question ID : 264330110568
Option 1 ID : 264330434549
Option 2 ID : 264330434552
Option 3 ID : 264330434550
Option 4 ID : 264330434551
Status : Answered
Chosen Option : 1

Q.21 With reference to electric charges, identify the INCORRECT statement.

- Ans
- 1. Lightning conductor can be used to predict lightning strike.
 - 2. The electrical charges produced by rubbing are called static charges.
 - 3. Lightning conductor can protect a building from lightning.
 - 4. Like charges repel and unlike charges attract each other.

Question ID : 264330182933
Option 1 ID : 264330717467
Option 2 ID : 264330717464
Option 3 ID : 264330717466
Option 4 ID : 264330717465
Status : Answered
Chosen Option : 1

Q.22 According to India Brand Equity Foundation (IBEF), India has the _____ largest road network in the world (as of August 2022).

- Ans
- 1. first
 - 2. fourth
 - 3. second
 - 4. third

Question ID : 264330119884
Option 1 ID : 264330469813
Option 2 ID : 264330469814
Option 3 ID : 264330469811
Option 4 ID : 264330469812
Status : Answered
Chosen Option : 4

Q.23 Chandertal, Renuka and Pong Dam are the three Ramsar wetland sites of which state?

- Ans
- 1. Karnataka
 - 2. Assam
 - 3. Gujarat
 - 4. Himachal Pradesh

Question ID : 264330131025
Option 1 ID : 264330513214
Option 2 ID : 264330513213
Option 3 ID : 264330513212
Option 4 ID : 264330513211
Status : Answered
Chosen Option : 4

Q.24 According to the Agricultural and Processed food products Export Development Authority (APEDA) 2021-2022, which state of India has the first rank in mango production?

- Ans
- 1. Bihar
 - 2. Uttar Pradesh
 - 3. Karnataka
 - 4. Maharashtra

Question ID : 264330132710
Option 1 ID : 264330519938
Option 2 ID : 264330519935
Option 3 ID : 264330519937
Option 4 ID : 264330519936
Status : Answered
Chosen Option : 4

Q.25 According to the census of India 2011, which state has the second highest density of population per square kilometre?

- Ans
- 1. Bihar
 - 2. Uttar Pradesh
 - 3. Andhra Pradesh
 - 4. West Bengal

Question ID : 264330167030
Option 1 ID : 264330655126
Option 2 ID : 264330655124
Option 3 ID : 264330655123
Option 4 ID : 264330655125
Status : Answered
Chosen Option : 4

Q.26 Which of the following is NOT correct about agriculture industry?

- Ans
- 1. Green revolution enabled India to achieve self-sufficiency in food grain production.
 - 2. Green revolution started the usage of HYV seeds.
 - 3. Green revolution resulted in the improvement in oilseeds.
 - 4. Green revolution led to the introduction of new technology.

Question ID : 26433082167
Option 1 ID : 264330322504
Option 2 ID : 264330322503
Option 3 ID : 264330322501
Option 4 ID : 264330322502
Status : Answered
Chosen Option : 3

Q.27 The post of Vice President has been taken from the Constitution of _____.

- Ans
- 1. Australia
 - 2. Germany
 - 3. The UK
 - 4. The US

Question ID : 264330110819
Option 1 ID : 264330435556
Option 2 ID : 264330435555
Option 3 ID : 264330435554
Option 4 ID : 264330435553
Status : Answered
Chosen Option : 3

Q.28 When did Dipa Karmakar win the Major Dhyan Chand Khel Ratna Award in Gymnastics?

Ans 1. 2016

2. 2017

3. 2018

4. 2015

Question ID : 264330176745

Option 1 ID : 264330693196

Option 2 ID : 264330693197

Option 3 ID : 264330693198

Option 4 ID : 264330693195

Status : Marked For Review

Chosen Option : 3

Q.29 The Harike Barrage has been constructed at the confluence of which two rivers?

Ans 1. Beas and Sutlej

2. Ganga and Yamuna

3. Luni and Subarnarekha

4. Mahanadi and Damodar

Question ID : 264330179021

Option 1 ID : 264330702087

Option 2 ID : 264330702089

Option 3 ID : 264330702088

Option 4 ID : 264330702090

Status : Answered

Chosen Option : 2

Q.30 Fa-Hien visited India during the reign of which of the following Gupta Kings?

Ans 1. Chandragupta II

2. Bhanugupta

3. Samudragupta

4. Budhagupta

Question ID : 264330171668

Option 1 ID : 264330673278

Option 2 ID : 264330673277

Option 3 ID : 264330673275

Option 4 ID : 264330673276

Status : Answered

Chosen Option : 3

Q.31 The study of cell structure is called _____.

Ans 1. Fisheries

2. Anatomy

3. cytology

4. Morphology

Question ID : 264330117601

Option 1 ID : 264330462431

Option 2 ID : 264330462430

Option 3 ID : 264330462429

Option 4 ID : 264330462432

Status : Answered

Chosen Option : 3

Q.32 Which Article of the Constitution of India empowers the Indian President to constitute a GST Council by an order?

- Ans 1. Article 279-A
 2. Article 277-A
 3. Article 280-A
 4. Article 278-A

Question ID : 264330130461
Option 1 ID : 264330510957
Option 2 ID : 264330510955
Option 3 ID : 264330510958
Option 4 ID : 264330510956
Status : Answered
Chosen Option : 1

Q.33 Kolayat festival is celebrated in which Indian state?

- Ans 1. Bihar
 2. Rajasthan
 3. Jharkhand
 4. Madhya Pradesh

Question ID : 264330109609
Option 1 ID : 264330430716
Option 2 ID : 264330430714
Option 3 ID : 264330430715
Option 4 ID : 264330430713
Status : Answered
Chosen Option : 1

Q.34 In which of the following Articles of India is it mentioned that "it shall be the duty of every citizen of India to cherish and follow the noble ideals which inspired our national struggle for freedom"?

- Ans 1. 51A (b)
 2. 51A (f)
 3. 51A (a)
 4. 51A (i)

Question ID : 264330133060
Option 1 ID : 264330521294
Option 2 ID : 264330521293
Option 3 ID : 264330521291
Option 4 ID : 264330521292
Status : Answered
Chosen Option : 1

Q.35 Guru Vempati Chinna Satyam has gained global recognition for the spread of which of the following classical dance forms of India?

- Ans 1. Bharatanatyam
 2. Kuchipudi
 3. Sattriya
 4. Kathak

Question ID : 264330112881
Option 1 ID : 264330443610
Option 2 ID : 264330443609
Option 3 ID : 264330443612
Option 4 ID : 264330443611
Status : Answered
Chosen Option : 1

Q.36 Who among the following is the author of the book Kitab-ul-Hind?

- Ans 1. Al Masudi
 2. Al-Biruni
 3. Shihabuddin al-Umari
 4. Ibn Battuta

Question ID : 264330120422
Option 1 ID : 264330471941
Option 2 ID : 264330471942
Option 3 ID : 264330471939
Option 4 ID : 264330471940
Status : Answered
Chosen Option : 2

Q.37 Kelucharan Mohapatra has been awarded the Padma Bhushan for which form of classical dance?

- Ans 1. Odissi
 2. Bharatanatyam
 3. Kuchipudi
 4. Kathak

Question ID : 26433074873
Option 1 ID : 264330293582
Option 2 ID : 264330293583
Option 3 ID : 264330293580
Option 4 ID : 264330293581
Status : Answered
Chosen Option : 1

Q.38 Who among the following Indian reformers is credited with the campaign for widow remarriage and on whose suggestion a law was passed by the British officials in 1856, permitting the same?

- Ans
- 1. Ayyankali
 - 2. Ishwar Chandra Vidyasagar
 - 3. Mumtaz Ali
 - 4. Savitri Bai Phule

Question ID : 264330119021
Option 1 ID : 264330466740
Option 2 ID : 264330466741
Option 3 ID : 264330466742
Option 4 ID : 264330466739
Status : Answered
Chosen Option : 2

Q.39 Identify the correct statements about Independence Day and Republic Day of India.
i) Independence Day is celebrated on 15th August since 1947.
ii) Republic Day is celebrated on 26th January since 1950.
iii) Independence Day is celebrated as Independence from British rule.
iv) Republic day is celebrated since the Constituent Assembly of India adopted the Constitution of India in 1949.

- Ans
- 1. i, iii and iv
 - 2. ii, iii and iv
 - 3. i, ii and iii
 - 4. i, ii and iv

Question ID : 264330118266
Option 1 ID : 264330464880
Option 2 ID : 264330464879
Option 3 ID : 264330464881
Option 4 ID : 264330464882
Status : Answered
Chosen Option : 3

Q.40 The 11th Fundamental Duty was added to the Indian Constitution by the _____ Constitutional Amendment Act.

- Ans
- 1. 87th
 - 2. 84th
 - 3. 88th
 - 4. 86th

Question ID : 264330114749
Option 1 ID : 264330451083
Option 2 ID : 264330451082
Option 3 ID : 264330451084
Option 4 ID : 264330451081
Status : Answered
Chosen Option : 4

Q.41 Who converted Menander to Buddhism?

- Ans
- 1. Bhadrabahu
 - 2. Buddhaghosh
 - 3. Nagasena
 - 4. Asvaghosha

Question ID : 264330134229
Option 1 ID : 264330525911
Option 2 ID : 264330525914
Option 3 ID : 264330525912
Option 4 ID : 264330525913
Status : Answered
Chosen Option : 3

Q.42 Which of the following is NOT one of the problems with microfinance?

- Ans
- 1. Skewed growth across the country
 - 2. Lack of transparency and absence of governance structure
 - 3. Operational, attitudinal and policy-level constraints
 - 4. Excess flow of funds towards microfinance

Question ID : 264330112457
Option 1 ID : 264330441916
Option 2 ID : 264330441913
Option 3 ID : 264330441914
Option 4 ID : 264330441915
Status : Answered
Chosen Option : 4

Q.43 When were female participants formally admitted to the Olympic Games?

- Ans
- 1. Paris, 1900
 - 2. London, 1908
 - 3. Helsinki, 1952
 - 4. Berlin, 1936

Question ID : 264330110370
Option 1 ID : 264330433760
Option 2 ID : 264330433759
Option 3 ID : 264330433758
Option 4 ID : 264330433757
Status : Answered
Chosen Option : 2

Q.44 Which of the following is NOT true regarding the antioxidants?

- Ans
- 1. It prevents the damage of cellular functions.
 - 2. It helps in the repair of cellular functions.
 - 3. Animal products are the chief source of antioxidants.
 - 4. It delays the ageing process.

Question ID : 264330177326
Option 1 ID : 264330695497
Option 2 ID : 264330695495
Option 3 ID : 264330695498
Option 4 ID : 264330695496
Status : Marked For Review
Chosen Option : 3

Q.45 The city of Hampi was named after the local mother goddess called _____ .

- Ans
- 1. Hampini
 - 2. Hidimba
 - 3. Hampidevi
 - 4. Pampadevi

Question ID : 264330118977
Option 1 ID : 264330466565
Option 2 ID : 264330466566
Option 3 ID : 264330466563
Option 4 ID : 264330466564
Status : Answered
Chosen Option : 2

Q.46 In foreign technology agreements, automatic permission is provided in high priority industry up to a sum of _____.

- Ans
- 1. ₹1 crore
 - 2. ₹2.5 crore
 - 3. ₹2 crores
 - 4. ₹1.5 crore

Question ID : 264330118254
Option 1 ID : 264330464831
Option 2 ID : 264330464834
Option 3 ID : 264330464833
Option 4 ID : 264330464832
Status : Answered
Chosen Option : 4

Q.47 Who pioneered the concept of microfinance?

- Ans
- 1. Medha Patkar
 - 2. Ela Bhatt
 - 3. Mohammad Yunus
 - 4. Anna Hazare

Question ID : 264330112453
Option 1 ID : 264330441900
Option 2 ID : 264330441897
Option 3 ID : 264330441898
Option 4 ID : 264330441899
Status : Marked For Review
Chosen Option : 3

Q.48 According to the Census of India 2011, which state recorded the highest sex ratio?

- Ans
- 1. Karnataka
 - 2. Tamil Nadu
 - 3. Kerala
 - 4. Andhra Pradesh

Question ID : 264330182971
Option 1 ID : 264330717619
Option 2 ID : 264330717616
Option 3 ID : 264330717617
Option 4 ID : 264330717618
Status : Answered
Chosen Option : 3

Q.49 'Both Feet on the Ground' is an autobiography of which of the following players?

- Ans
- 1. Cristiano Ronaldo
 - 2. Lionel Messi
 - 3. Bobby Moore
 - 4. David Beckham

Question ID : 26433055361
Option 1 ID : 264330216430
Option 2 ID : 264330216429
Option 3 ID : 264330216428
Option 4 ID : 264330216431
Status : Answered
Chosen Option : 3

Q.50 Which of the following was NOT a reason for emphasizing industrial development in the five year plans?

- Ans
- 1. Industry doesn't require high investment
 - 2. Industry promotes modernisation
 - 3. Industry promotes overall prosperity
 - 4. Industry provides more stable employment than agriculture

Question ID : 264330117748
Option 1 ID : 264330462810
Option 2 ID : 264330462808
Option 3 ID : 264330462809
Option 4 ID : 264330462807
Status : Answered
Chosen Option : 1

Section : Reasoning

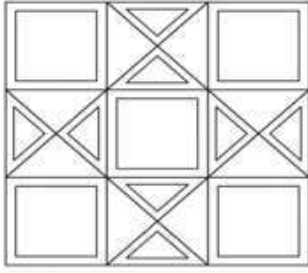
Q.1 Select the correct combination of mathematical signs to sequentially replace the * signs and to balance the given equation.

$$200 * 13 * 9 * 200 * 25 = 75$$

- Ans
- 1. +, x, -, +
 - 2. +, -, x, +
 - 3. x, +, +, -
 - 4. -, x, -, +

Question ID : 26433092503
Option 1 ID : 264330363302
Option 2 ID : 264330363301
Option 3 ID : 264330363303
Option 4 ID : 264330363304
Status : Answered
Chosen Option : 4

Q.2 How many triangles are there in the given figure?



- Ans
- 1. 24
 - 2. 40
 - 3. 52
 - 4. 44

Question ID : 26433091709

Option 1 ID : 264330360204

Option 2 ID : 264330360202

Option 3 ID : 264330360201

Option 4 ID : 264330360203

Status : Answered

Chosen Option : 3

Q.3 Which of the following terms will replace the question mark (?) in the given series?
XUEJ, TRIM, ?, LLQS, HIUV

- Ans
- 1. POMP
 - 2. QONN
 - 3. QONO
 - 4. PPMO

Question ID : 264330102176

Option 1 ID : 264330401171

Option 2 ID : 264330401169

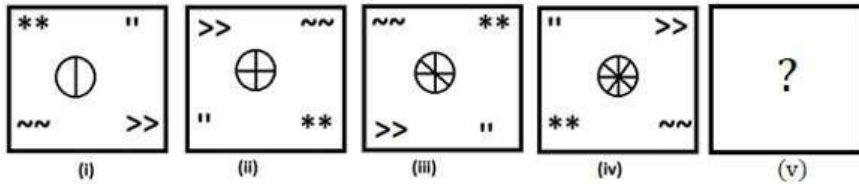
Option 3 ID : 264330401172

Option 4 ID : 264330401170

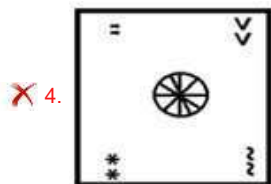
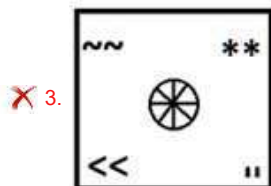
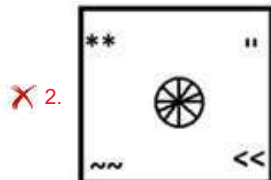
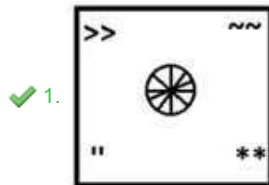
Status : Answered

Chosen Option : 1

Q.4 Select the figure from among the given options that can replace the question mark (?) in the following series.



Ans



Question ID : 264330106552
 Option 1 ID : 264330418510
 Option 2 ID : 264330418511
 Option 3 ID : 264330418512
 Option 4 ID : 264330418509
 Status : Answered
 Chosen Option : 1

Q.5 Two statements are given followed by two conclusions numbered I and II. Assuming the statements to be true, even if they seem to be at variance with commonly known facts, decide which of the conclusions logically follow(s) from the statements.

Statements:

All cakes are candies.

No pastry is a candy.

Conclusions:

I. All pastries are cakes.

II. Some cakes are pastries.

Ans ✓ 1. Neither conclusion I nor II follows

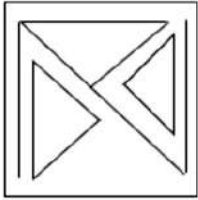
✗ 2. Both conclusions I and II follow

✗ 3. Only conclusion I follows

✗ 4. Only conclusion II follows

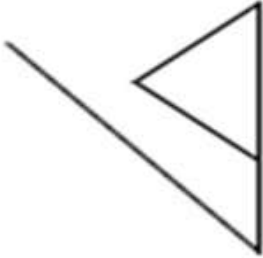
Question ID : 26433045343
 Option 1 ID : 264330177810
 Option 2 ID : 264330177809
 Option 3 ID : 264330177807
 Option 4 ID : 264330177808
 Status : Answered
 Chosen Option : 1

Q.6 Select the option figure which is embedded in the given figure. (Rotation is NOT allowed).

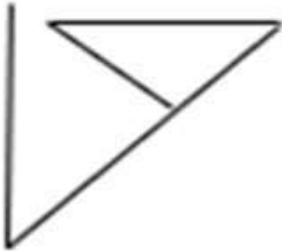


Ans

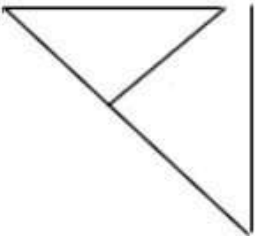
✗ 1.



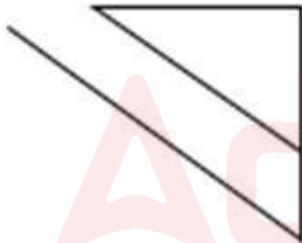
✗ 2.



✓ 3.



✗ 4.



Question ID : 26433085531

Option 1 ID : 264330335826

Option 2 ID : 264330335828

Option 3 ID : 264330335825

Option 4 ID : 264330335827

Status : Answered

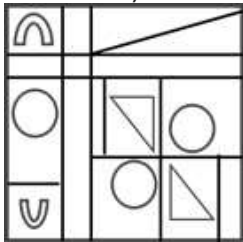
Chosen Option : 3

Q.7 Select the number from among the given options that can replace the question mark (?) in the following series.
2, 4, 12, 48, ?, 1440

- Ans 1. 960
 2. 240
 3. 640
 4. 480

Question ID : 264330111625
 Option 1 ID : 264330438587
 Option 2 ID : 264330438588
 Option 3 ID : 264330438585
 Option 4 ID : 264330438586
 Status : Answered
 Chosen Option : 2

Q.8 Select the option figure which is embedded in the given figure as its part (rotation is NOT allowed).



- Ans 1.
 2.
 3.
 4.

Question ID : 264330116996
 Option 1 ID : 264330460066
 Option 2 ID : 264330460068
 Option 3 ID : 264330460065
 Option 4 ID : 264330460067
 Status : Answered
 Chosen Option : 1

Q.9 Select the option in which the given figure is embedded (rotation is NOT allowed).

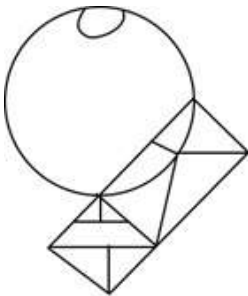


Ans

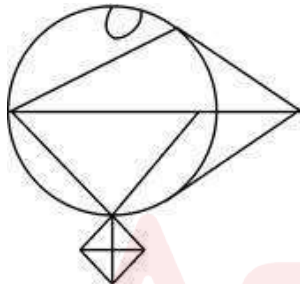
X 1.



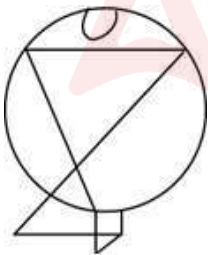
X 2.



✓ 3.



X 4.



Question ID : 264330114683

Option 1 ID : 264330450819

Option 2 ID : 264330450820

Option 3 ID : 264330450818

Option 4 ID : 264330450817

Status : Answered

Chosen Option : 3

Q.10 Select the option that is related to the third term in the same way as the second term is related to the first term and the sixth term is related to the fifth term.

8 : 2 :: 12 : ? :: 24 : 10

Ans 1. 4

2. 2

3. 6

4. 8

Question ID : 264330101055

Option 1 ID : 264330396766

Option 2 ID : 264330396768

Option 3 ID : 264330396767

Option 4 ID : 264330396765

Status : Answered

Chosen Option : 1

Q.11 Q, R, S, T, U and V were six doctors sitting around a circular table, facing the centre. They were equidistant from each other. Q was to the immediate right of U. R was exactly in between V and T. S was to the immediate right of Q. T was second to the left of Q. Who among the following was sitting third to the right of U?

Ans 1. T

2. R

3. S

4. V

Question ID : 26433087009

Option 1 ID : 264330341680

Option 2 ID : 264330341679

Option 3 ID : 264330341678

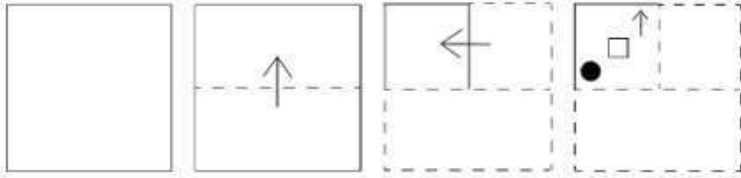
Option 4 ID : 264330341677

Status : Answered

Chosen Option : 4

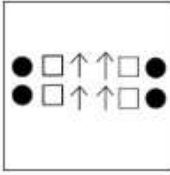
Adda247

Q.12 A paper is folded and cut as shown below. How will it appear when unfolded?

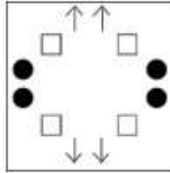


Ans

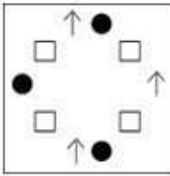
✗ 1.



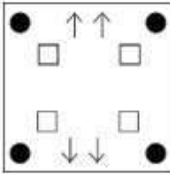
✓ 2.



✗ 3.



✗ 4.



Question ID : 264330112989

Option 1 ID : 264330444041

Option 2 ID : 264330444042

Option 3 ID : 264330444043

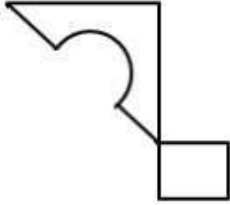
Option 4 ID : 264330444044

Status : Answered

Chosen Option : 2

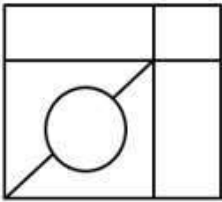
Adda247

Q.13 Select the option in which the given figure is embedded (rotation is NOT allowed).

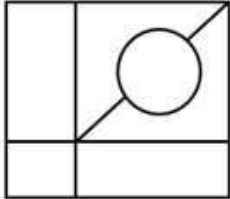


Ans

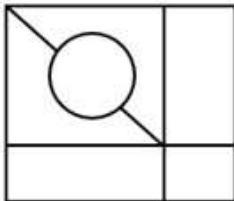
✗ 1.



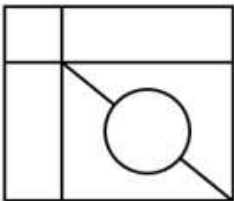
✗ 2.



✓ 3.



✗ 4.



Question ID : 264330106330

Option 1 ID : 264330417621

Option 2 ID : 264330417622

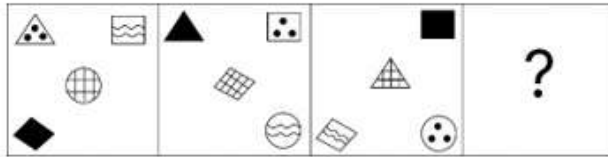
Option 3 ID : 264330417624

Option 4 ID : 264330417623

Status : Answered

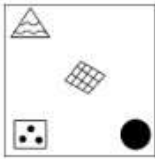
Chosen Option : 3

Q.14 Select the figure from the given options that can replace the question mark (?) in the following series.

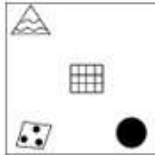


Ans


1.




2.



3.



4.



Question ID : 264330106164

Option 1 ID : 264330416960

Option 2 ID : 264330416959

Option 3 ID : 264330416958

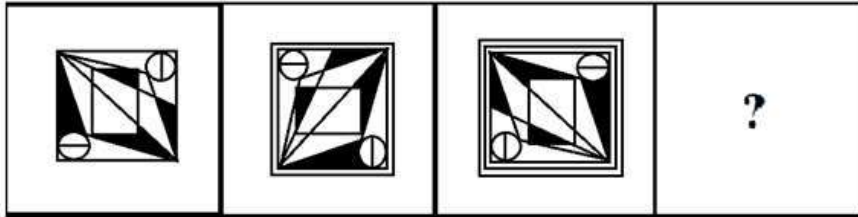
Option 4 ID : 264330416957

Status : Answered

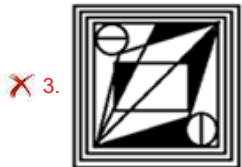
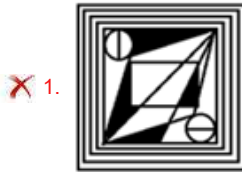
Chosen Option : 2

Adda247

Q.15 Select the figure that will come next in the following figure series.



Ans



Question ID : 264330132142

Option 1 ID : 264330517664

Option 2 ID : 264330517665

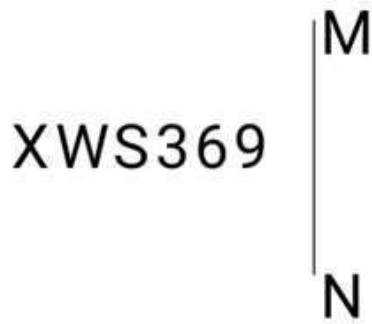
Option 3 ID : 264330517663

Option 4 ID : 264330517666

Status : Answered

Chosen Option : 2

Q.16 Select the correct mirror image of the given figure when the mirror is placed at MN as shown below.



- Ans
- 1. 9̂32WX
 - 2. 9̂3SWX
 - 3. 9̂3SWX
 - 4. 9̂32WX

Question ID : 264330126681

Option 1 ID : 264330496397


Option 2 ID : 264330496396

Option 3 ID : 264330496399

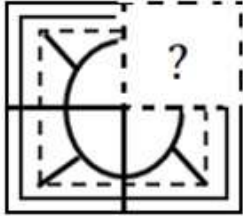
Option 4 ID : 264330496398

Status : Answered



Chosen Option : 4



Q.17 Select the option figure that will replace the question mark (?) in the figure given below to complete the pattern.



Ans



Question ID : 264330131104

Option 1 ID : 264330513530

Option 2 ID : 264330513528

Option 3 ID : 264330513529

Option 4 ID : 264330513527

Status : Answered

Chosen Option : 4

Q.18 In a certain code language, 'PIG' is written as '49' and 'HAT' is written as '52'. How will 'CAB' be written in that language?

Ans ✗ 1. 79

✗ 2. 51

✓ 3. 75

✗ 4. 63

Question ID : 26433089420

Option 1 ID : 264330351183

Option 2 ID : 264330351184

Option 3 ID : 264330351181

Option 4 ID : 264330351182

Status : Answered

Chosen Option : 3

Q.19 Select the correct combination of mathematical signs to sequentially replace the * signs and to balance the given equation.

$$12 * 5 * 9 * 54 * 9 = 1$$

Ans 1. $\times, \times, \div, -$

2. $+, \times, \div, -$

3. $\times, \times, -, -$

4. $\times, \times, \div, +$

Question ID : 26433092508

Option 1 ID : 264330363324

Option 2 ID : 264330363322

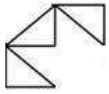
Option 3 ID : 264330363321

Option 4 ID : 264330363323

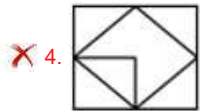
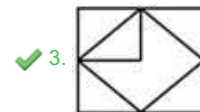
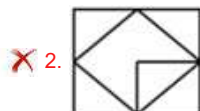
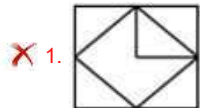
Status : Answered

Chosen Option : 1

Q.20 Select the option in which the given figure is embedded (rotation is NOT allowed).



Ans



Question ID : 264330101167

Option 1 ID : 264330397213

Option 2 ID : 264330397216

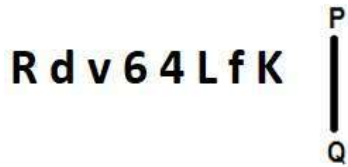
Option 3 ID : 264330397215

Option 4 ID : 264330397214

Status : Answered

Chosen Option : 3

Q.21 Select the correct mirror image of the given figure when the mirror is placed at PQ as shown below.



- Ans
- 1. K f 4 L v b R
 - 2. K f J P v b R
 - 3. K f J P 9 v p R
 - 4. K J L f 6 4 L f R

Question ID : 26433080780
 Option 1 ID : 264330317055
 Option 2 ID : 264330317054
 Option 3 ID : 264330317053
 Option 4 ID : 264330317056
 Status : Answered
 Chosen Option : 2

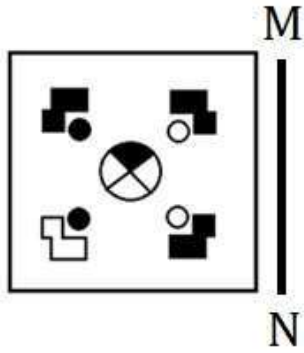
Q.22 The following figures show the sequence of folding a piece of paper. The last figure shows the manner in which the folded paper has been cut. Choose a figure which would most closely resemble the unfolded form of the paper.



- Ans
- 1. [Diagram of a square with four jagged cutouts at the corners, one in each quadrant]
 - 2. [Diagram of a square with four jagged cutouts, two on the left and two on the right]
 - 3. [Diagram of a square with four jagged cutouts, two on the top and two on the bottom]
 - 4. [Diagram of a square with four jagged cutouts, one on each side]

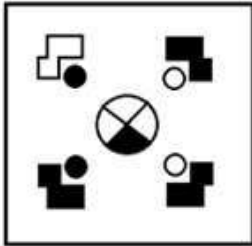
Question ID : 26433074798
 Option 1 ID : 264330293281
 Option 2 ID : 264330293282
 Option 3 ID : 264330293283
 Option 4 ID : 264330293280
 Status : Answered
 Chosen Option : 1

Q.23 Select the correct mirror image of the given figure when the mirror is placed at MN as shown below.

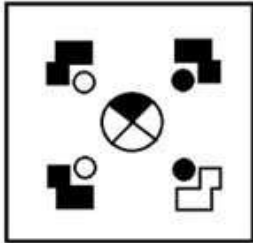


Ans

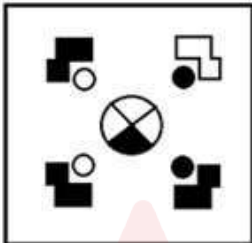
✗ 1.



✓ 2.



✗ 3.



✗ 4.



Question ID : 264330112309

Option 1 ID : 264330441321

Option 2 ID : 264330441322

Option 3 ID : 264330441323

Option 4 ID : 264330441324

Status : Answered

Chosen Option : 2

Q.24 Select the set in which the numbers are related in the same way as are the numbers of the following sets.

(NOTE: Operations should be performed on the whole numbers, without breaking down the numbers into its constituent digits. E.g. 13 – Operations on 13 such as adding/deleting/multiplying etc. to 13 can be performed. Breaking down 13 into 1 and 3 and then performing mathematical operations on 1 and 3 is not allowed)
(18, 28, 38)
(11, 26, 41)

- Ans
- 1. (17, 48, 53)
 - 2. (13, 24, 37)
 - 3. (9, 27, 43)
 - 4. (18, 35, 52)

Question ID : 26433052097
Option 1 ID : 264330203693
Option 2 ID : 264330203690
Option 3 ID : 264330203692
Option 4 ID : 264330203691
Status : Answered
Chosen Option : 4

Q.25 Select the word-pair that best represents a similar relationship to the one expressed in the pair of words given below.

(The words must be considered as meaningful English words and must not be related to each other based on the number of letters/number of consonants/vowels in the word.)

Hexagon : Septagon

- Ans
- 1. Radius : Diameter
 - 2. Triangle : Rectangle
 - 3. Chord : Circle
 - 4. Area : Square

Question ID : 26433053237
Option 1 ID : 264330208250
Option 2 ID : 264330208251
Option 3 ID : 264330208253
Option 4 ID : 264330208252
Status : Answered
Chosen Option : 2

Section : Numerical Ability

Q.1 Which ratio is the greatest among the following?

- Ans
- 1. 5 : 8
 - 2. 4 : 7
 - 3. 3 : 5
 - 4. 1 : 3

Question ID : 264330118079
Option 1 ID : 264330464131
Option 2 ID : 264330464133
Option 3 ID : 264330464134
Option 4 ID : 264330464132
Status : Answered
Chosen Option : 4

Q.2 A sum of ₹2,400 yields a simple interest of ₹460 in 2 years and 4 months. The rate of interest per annum is:

Ans

1. $5\frac{3}{14}\%$

2. $7\frac{5}{14}\%$

3. $7\frac{3}{14}\%$

4. $8\frac{3}{14}\%$

Question ID : 264330119338

Option 1 ID : 264330467641

Option 2 ID : 264330467642

Option 3 ID : 264330467639

Option 4 ID : 264330467640

Status : Answered

Chosen Option : 4

Q.3 Anjali and Manju together can do a piece of work in 5 days. If Anjali does twice as much work as Manju in a given time, how long would Anjali alone take to do the work?

Ans

1. 6 days

2. 7.5 days

3. 7 days

4. 6.5 days

Question ID : 264330103630

Option 1 ID : 264330406825

Option 2 ID : 264330406828

Option 3 ID : 264330406827

Option 4 ID : 264330406826

Status : Answered

Chosen Option : 2

Q.4 If the loss is $\frac{1}{6}$ of the selling price of an article, then the loss percentage is:

Ans

1. $13\frac{1}{7}\%$

2. $14\frac{2}{7}\%$

3. $12\frac{3}{7}\%$

4. $16\frac{1}{7}\%$

Question ID : 264330119331

Option 1 ID : 264330467611

Option 2 ID : 264330467613

Option 3 ID : 264330467612

Option 4 ID : 264330467614

Status : Answered

Chosen Option : 2

Q.5 The price of a car increased by 25%. By what percentage should the price now be reduced to bring it to the actual price?

- Ans
- 1. 20%
 - 2. 25%
 - 3. 15%
 - 4. 35%

Question ID : 264330118048
Option 1 ID : 264330464009
Option 2 ID : 264330464007
Option 3 ID : 264330464008
Option 4 ID : 264330464010
Status : Answered
Chosen Option : 1

Q.6 A train covers a distance of 10 km in 10 minutes. If its speed is decreased by 20 km/h, then the time taken by it to cover the same distance will be:

- Ans
- 1. 18 minutes
 - 2. 15 minutes
 - 3. 20 minutes
 - 4. 12 minutes

Question ID : 264330168933
Option 1 ID : 264330662537
Option 2 ID : 264330662536
Option 3 ID : 264330662538
Option 4 ID : 264330662535
Status : Answered
Chosen Option : 2

Q.7 A shopkeeper offers a discount of 15% on the marked price of an article and still makes a profit of 25%. If its marked price is ₹2,100, then find the cost price of the article.

- Ans
- 1. ₹1,248
 - 2. ₹1,842
 - 3. ₹1,428
 - 4. ₹1,284

Question ID : 264330130087
Option 1 ID : 264330509580
Option 2 ID : 264330509581
Option 3 ID : 264330509579
Option 4 ID : 264330509582
Status : Answered
Chosen Option : 3

Q.8 Joy borrowed some amount from a bank at the rate of 6% per annum, compounded annually. If he finished paying his loan by paying ₹20,000 at the end of 5 years, then the amount of loan that he had taken (rounded to the nearest thousand rupees) was:

- Ans
- 1. ₹12,000
 - 2. ₹15,000
 - 3. ₹16,000
 - 4. ₹13,000

Question ID : 264330103737
Option 1 ID : 264330407253
Option 2 ID : 264330407255
Option 3 ID : 264330407256
Option 4 ID : 264330407254
Status : Answered
Chosen Option : 2

Q.9 The ratio of the salaries of Ram and Shyam is 8 : 5. If the salaries of Ram and Shyam are increased by ₹2,600, then their ratio becomes 15 : 11. What is the salary of Shyam?

- Ans
- 1. ₹5,000
 - 2. ₹3,500
 - 3. ₹4,000
 - 4. ₹4,500

Question ID : 264330130075
Option 1 ID : 264330509534
Option 2 ID : 264330509531
Option 3 ID : 264330509532
Option 4 ID : 264330509533
Status : Answered
Chosen Option : 3

Q.10 The highest common factor of 161 and 207 is:

- Ans
- 1. 9
 - 2. 1
 - 3. 7
 - 4. 23

Question ID : 264330103577
Option 1 ID : 264330406616
Option 2 ID : 264330406613
Option 3 ID : 264330406615
Option 4 ID : 264330406614
Status : Answered
Chosen Option : 4

Q.11 If $\frac{844}{0.844} = \frac{84.4}{K}$, then what is the value of K?

- Ans
- 1. 8.44
 - 2. 0.0844
 - 3. 0.844
 - 4. 0.00844

Question ID : 264330105982
Option 1 ID : 264330416232
Option 2 ID : 264330416230
Option 3 ID : 264330416231
Option 4 ID : 264330416229
Status : Answered
Chosen Option : 2

Q.12 What is the area of an equilateral triangle whose sides are $8\sqrt{3}$ cm?

- Ans
- 1. $46\sqrt{3}$ cm²
 - 2. $38\sqrt{3}$ cm²
 - 3. $42\sqrt{3}$ cm²
 - 4. $48\sqrt{3}$ cm²

Question ID : 264330106026
Option 1 ID : 264330416407
Option 2 ID : 264330416405
Option 3 ID : 264330416406
Option 4 ID : 264330416408
Status : Answered
Chosen Option : 4

Q.13 The average of n natural odd numbers is _____, where n is odd.

- Ans
- 1. $n + 1$
 - 2. $\frac{n + 1}{2}$
 - 3. n
 - 4. $\frac{n}{2}$

Question ID : 264330130165
Option 1 ID : 264330509772
Option 2 ID : 264330509774
Option 3 ID : 264330509771
Option 4 ID : 264330509773
Status : Answered
Chosen Option : 3

Q.14 If the area of great circle is $36\pi \text{ m}^2$, then find the volume of a hemisphere.
(Use $\pi=3.14$)

- Ans
- 1. 445.68 m^3
 - 2. 464.32 m^3
 - 3. 452.16 m^3
 - 4. 458.74 m^3

Question ID : 264330111493
Option 1 ID : 264330438058
Option 2 ID : 264330438059
Option 3 ID : 264330438057
Option 4 ID : 264330438060
Status : Answered
Chosen Option : 3

Q.15 $\frac{17}{250}$ is equivalent to:

- Ans
- 1. 0.0068
 - 2. 0.068
 - 3. 0.68
 - 4. 0.088

Question ID : 264330111434
Option 1 ID : 264330437823
Option 2 ID : 264330437822
Option 3 ID : 264330437821
Option 4 ID : 264330437824
Status : Answered
Chosen Option : 2

Section : Computer Proficiency

Q.1 Which of the following is an example of web browser?

- Ans
- 1. Mozilla Firefox
 - 2. Outlook 365
 - 3. Yahoo mail
 - 4. Google Search

Question ID : 264330178590
Option 1 ID : 264330700390
Option 2 ID : 264330700388
Option 3 ID : 264330700387
Option 4 ID : 264330700389
Status : Answered
Chosen Option : 1

Q.2 What does the 'Grammar Check' feature in MS-Word 365 do?

- Ans
- 1. It provides suggestions to improve the document's structure.
 - 2. It formats the text based on predefined style rules.
 - 3. It highlights correct spelling and offers suggestions.
 - 4. It identifies and provides suggestions to correct grammatical errors in the text.

Question ID : 264330181818
Option 1 ID : 264330713120
Option 2 ID : 264330713122
Option 3 ID : 264330713121
Option 4 ID : 264330713119
Status : Answered
Chosen Option : 4

Q.3 What is the maximum number of columns existing in MS-Excel 2010?

- Ans
- 1. 8,382 columns
 - 2. 2,048 columns
 - 3. 32,386 columns
 - 4. 16,384 columns

Question ID : 264330171404
Option 1 ID : 264330672232
Option 2 ID : 264330672231
Option 3 ID : 264330672234
Option 4 ID : 264330672233
Status : Answered
Chosen Option : 4

Q.4 Which of the following tabs on the MS Excel 365 ribbon has the 'Sort & Filter' group?

- Ans
- 1. Review
 - 2. Edit
 - 3. Data
 - 4. Formula

Question ID : 264330180820
Option 1 ID : 264330709246
Option 2 ID : 264330709243
Option 3 ID : 264330709245
Option 4 ID : 264330709244
Status : Answered
Chosen Option : 1

Q.5 Which protocol is commonly used for sending emails from a client to a server?

- Ans
- 1. Internet Messaging Access Protocol (IMAP)
 - 2. Hypertext Transfer Protocol (HTTP)
 - 3. Simple Mail Transfer Protocol (SMTP)
 - 4. Post office Protocol (POP3)

Question ID : 264330182464
Option 1 ID : 264330715647
Option 2 ID : 264330715650
Option 3 ID : 264330715648
Option 4 ID : 264330715649
Status : Answered
Chosen Option : 3

Q.6 In MS Excel 365, which menu or tab is used to access the 'Save' or 'Save as' options?

- Ans
- 1. File
 - 2. Home
 - 3. Edit
 - 4. Insert

Question ID : 264330182120
Option 1 ID : 264330714319
Option 2 ID : 264330714320
Option 3 ID : 264330714322
Option 4 ID : 264330714321
Status : Answered
Chosen Option : 1

Q.7 Which of the following is NOT used to modify selected text in MS-Word 365?

- Ans
- 1. Ctrl + I
 - 2. Ctrl + O
 - 3. Ctrl + U
 - 4. Ctrl + B

Question ID : 264330178269
Option 1 ID : 264330699133
Option 2 ID : 264330699134
Option 3 ID : 264330699132
Option 4 ID : 264330699131
Status : Answered
Chosen Option : 2

Q.8 In Print Preview mode in Microsoft Word 365, what can you review and modify before printing the document?

- Ans
- 1. Page layout
 - 2. Document content and editing options
 - 3. Printer connectivity and network settings
 - 4. Font styles and sizes

Question ID : 264330177675
Option 1 ID : 264330696816
Option 2 ID : 264330696817
Option 3 ID : 264330696818
Option 4 ID : 264330696815
Status : Answered
Chosen Option : 1

Q.9 What is the function of the 'Superscript' feature in Microsoft Word 365?

- Ans
- 1. Makes the text bold and italic
 - 2. Adds a line under the text
 - 3. Makes the text larger and below the baseline
 - 4. Makes the text smaller and above the baseline

Question ID : 264330180717
Option 1 ID : 264330708838
Option 2 ID : 264330708837
Option 3 ID : 264330708836
Option 4 ID : 264330708835
Status : Answered
Chosen Option : 3

Q.10 When we open MS-Word 365, which of the following could be found?

- Ans**
- 1. Blank page without any default name
 - 2. Blank page with a default name "Document1"
 - 3. Blank page with a default name "Doc 1"
 - 4. Blank page with a default name "page 1"

Question ID : **264330175976**

Option 1 ID : **264330690202**

Option 2 ID : **264330690199**

Option 3 ID : **264330690201**

Option 4 ID : **264330690200**

Status : **Answered**

Chosen Option : **2**



Constable Executive Male and Female in Delhi Police Examination 2023

Roll Number	
Candidate Name	
Venue Name	OCBT IT services
Exam Date	22/11/2023
Exam Time	9:00 AM - 10:30 AM
Subject	Constable Executive Male and Female in Delhi Police Examination 2023

Section : General Knowledge

Q.1 Article 21A pertains to which of the following rights?

- Ans 1. Right to Education
 2. Right to Freedom
 3. Right to Freedom of Religion
 4. Right to Equality

Question ID : 264330116395
Option 1 ID : 264330457667
Option 2 ID : 264330457666
Option 3 ID : 264330457668
Option 4 ID : 264330457665
Status : Answered
Chosen Option : 1

Q.2 _____ is the first South Indian musician to win a Grammy for Best World Music Album for his role as a ghatam and morsing player in Mickey Hart's album 'Planet Drum'.

- Ans 1. Phani Narayana
 2. S Ballesh
 3. Dr. Ramachandra Murthy
 4. TH Vinayakram

Question ID : 264330113234
Option 1 ID : 264330445021
Option 2 ID : 264330445023
Option 3 ID : 264330445024
Option 4 ID : 264330445022
Status : Not Answered
Chosen Option : --

Q.3 GNP at market price is measured as:

- Ans 1. GDP at market price – Depreciation
 2. GNP at market price + subsidies
 3. GDP at market price + Net factor income from abroad
 4. NDP at factor cost + Net factor income from abroad

Question ID : 264330110165
Option 1 ID : 264330432937
Option 2 ID : 264330432939
Option 3 ID : 264330432938
Option 4 ID : 264330432940
Status : Answered
Chosen Option : 3

Q.4 In which year was Indian Olympic Association formed?

- Ans 1. 1920
 2. 1927
 3. 1900
 4. 1928

Question ID : 264330176101
Option 1 ID : 264330690700
Option 2 ID : 264330690699
Option 3 ID : 264330690702
Option 4 ID : 264330690701
Status : Answered
Chosen Option : 4

Q.5 Which of the following does NOT come under Fundamental Duties?

- Ans 1. To safeguard public property
 2. To cherish and follow the noble ideals that inspired the national struggle for freedom
 3. To value and preserve rich heritage
 4. To secure a living wage

Question ID : 264330173481
Option 1 ID : 264330680404
Option 2 ID : 264330680405
Option 3 ID : 264330680403
Option 4 ID : 264330680406
Status : Answered
Chosen Option : 4

Q.6 The novel 'The Inheritance of Loss' is written by:

- Ans 1. Aravind Adiga
 2. Anita Desai
 3. Kiran Desai
 4. Anees Salim

Question ID : 26433071707
Option 1 ID : 264330281252
Option 2 ID : 264330281254
Option 3 ID : 264330281253
Option 4 ID : 264330281255
Status : Answered
Chosen Option : 2

Q.7 The Chief Minister of a State acts as _____ of the concerned zonal council on rotation basis along with the other Chief Ministers in that zonal council.

- Ans 1. Member
 2. Vice Chairman
 3. Ex- officio Chairman
 4. Chairman

Question ID : 264330120188
Option 1 ID : 264330471008
Option 2 ID : 264330471010
Option 3 ID : 264330471009
Option 4 ID : 264330471007
Status : Answered
Chosen Option : 1

Q.8 The Gateway of India, located in the city of Mumbai, is built in which of the following architectural styles?

- Ans
- 1. Indo-Greek
 - 2. Indo-British
 - 3. Indo-Saracenic
 - 4. Indo-Sino

Question ID : 264330111847
Option 1 ID : 264330439473
Option 2 ID : 264330439475
Option 3 ID : 264330439474
Option 4 ID : 264330439476
Status : Answered
Chosen Option : 2

Q.9 The Montagu-Chelmsford Reforms led to enactment of the Government of India Act of:

- Ans
- 1. 1909
 - 2. 1858
 - 3. 1919
 - 4. 1935

Question ID : 264330113575
Option 1 ID : 264330446387
Option 2 ID : 264330446386
Option 3 ID : 264330446388
Option 4 ID : 264330446385
Status : Answered
Chosen Option : 3

Q.10 This temple, that was built by Raja Bhimdev I of the Solanki Dynasty, has a rectangular pond called 'Surya Kund' in front of it. What is the name of this temple?

- Ans
- 1. Modhera Sun Temple
 - 2. Khajuraho
 - 3. Konark Sun Temple
 - 4. Chausath Yogini

Question ID : 264330111855
Option 1 ID : 264330439506
Option 2 ID : 264330439508
Option 3 ID : 264330439507
Option 4 ID : 264330439505
Status : Answered
Chosen Option : 1

Q.11 Which of the following statements is correct about membership in the World Trade Organization (WTO)?

- Ans
- 1. It negotiates only bilateral trade agreements between countries.
 - 2. All the countries of the world are members of WTO.
 - 3. India reduced trade restrictions due to obligations to WTO.
 - 4. It was established as a new organisation in 1991.

Question ID : 264330111772
Option 1 ID : 264330439176
Option 2 ID : 264330439173
Option 3 ID : 264330439174
Option 4 ID : 264330439175
Status : Not Answered
Chosen Option : --

Q.12 Select the correct arrangement of the taxonomic hierarchy in ascending order from the following.

- a Genus → Species → Family → Order → Class → Phylum → Kingdom
- b Genus → Species → Family → Class → Order → Phylum → Kingdom
- c Species → Genus → Family → Order → Class → Phylum → Kingdom
- d Species → Genus → Family → Order → Phylum → Class → Kingdom

- Ans
- 1. a
 - 2. c
 - 3. b
 - 4. d

Question ID : 264330131731
Option 1 ID : 264330516023
Option 2 ID : 264330516025
Option 3 ID : 264330516024
Option 4 ID : 264330516026
Status : Answered
Chosen Option : 3

Q.13 At independence, which was the major employment-producing sector?

- Ans
- 1. Agriculture
 - 2. Service
 - 3. Industrial
 - 4. Foreign trade

Question ID : 264330177864
Option 1 ID : 264330697543
Option 2 ID : 264330697545
Option 3 ID : 264330697544
Option 4 ID : 264330697546
Status : Answered
Chosen Option : 1

Q.14 What is the study of coins called?

- Ans
- 1. Almanac
 - 2. Numismatics
 - 3. Petroglyphs
 - 4. Curator

Question ID : 264330118962
Option 1 ID : 264330466505
Option 2 ID : 264330466503
Option 3 ID : 264330466504
Option 4 ID : 264330466506
Status : Answered
Chosen Option : 2

Q.15 'National AYUSH Mission' has been extended up to 31st March 2026. When was the scheme launched?

- Ans
- 1. 2015
 - 2. 2016
 - 3. 2014
 - 4. 2012

Question ID : 264330111587
Option 1 ID : 264330438435
Option 2 ID : 264330438436
Option 3 ID : 264330438434
Option 4 ID : 264330438433
Status : Answered
Chosen Option : 2

Q.16 Which of the following is the most abundant mineral in our body?

- Ans
- 1. Phosphorous
 - 2. Calcium
 - 3. Iron
 - 4. Copper

Question ID : 264330120920
Option 1 ID : 264330473896
Option 2 ID : 264330473897
Option 3 ID : 264330473895
Option 4 ID : 264330473898
Status : Answered
Chosen Option : 2

Q.17 Who is the only living representative of the extremely ancient and diverse group, Sphenopsida, commonly known as 'horsetails'?

- Ans
- 1. Equisetum
 - 2. Psilotum
 - 3. Dryopteris
 - 4. Adiantum

Question ID : 264330130981
Option 1 ID : 264330513036
Option 2 ID : 264330513038
Option 3 ID : 264330513037
Option 4 ID : 264330513035
Status : Not Answered
Chosen Option : --

Q.18 In 2003, _____ became the first Indian woman dancer to be awarded with the Padma Vibhushan.

- Ans
- 1. Rukmini Devi Arundale
 - 2. Sonal Mansingh
 - 3. Sitara Devi
 - 4. Shovana Narayan

Question ID : 26433097124
Option 1 ID : 264330381196
Option 2 ID : 264330381195
Option 3 ID : 264330381193
Option 4 ID : 264330381194
Status : Answered
Chosen Option : 1

Q.19 What was the primary outcome of the liberalisation and privatisation initiatives under the New Economic Policy (NEP) in 1991, followed by the Indian government?

- Ans
- 1. Fiscal policy reforms
 - 2. Globalisation
 - 3. Centralization
 - 4. Monetary policy reforms

Question ID : 264330110179
Option 1 ID : 264330432993
Option 2 ID : 264330432994
Option 3 ID : 264330432996
Option 4 ID : 264330432995
Status : Answered
Chosen Option : 2

Q.20 Goa is well known for which of the following ores?

- Ans
- 1. Uranium and copper
 - 2. Iron and manganese
 - 3. Gold and graphite
 - 4. Petroleum and coal

Question ID : 264330176003
Option 1 ID : 264330690308
Option 2 ID : 264330690309
Option 3 ID : 264330690310
Option 4 ID : 264330690307
Status : Not Answered
Chosen Option : --

Q.21 The English word juggernaut comes from the name Jagannath, meaning 'Lord of the World'. Where is the world-famous Shree Jagannath temple located?

- Ans
- 1. Kolkata
 - 2. Cuttack
 - 3. Puri
 - 4. Bhubaneswar

Question ID : 264330119001
Option 1 ID : 264330466662
Option 2 ID : 264330466660
Option 3 ID : 264330466659
Option 4 ID : 264330466661
Status : Answered
Chosen Option : 3

Q.22 North-South corridor, that is part of Golden Quadrilateral super highways connects which two States/Union Territories?

- Ans
- 1. Jammu & Kashmir and Tamil Nadu
 - 2. Rajasthan and West Bengal
 - 3. Assam and Gujarat
 - 4. Chandigarh and Tamil Nadu

Question ID : 264330138063
Option 1 ID : 264330540859
Option 2 ID : 264330540862
Option 3 ID : 264330540860
Option 4 ID : 264330540861
Status : Answered
Chosen Option : 1

Q.23 The Delhi Sultans built many cities in the area that is known as Delhi today. Which of the following was NOT built by them?

- Ans
- 1. Siri
 - 2. Jahanpanah
 - 3. Lal Kot
 - 4. Tughlakabad

Question ID : 264330106562
Option 1 ID : 264330418549
Option 2 ID : 264330418551
Option 3 ID : 264330418552
Option 4 ID : 264330418550
Status : Answered
Chosen Option : 3

Q.24 Which type of electoral system has been adopted in case of Rajya Sabha by the Constitution?

- Ans
- 1. Two Party System
 - 2. First Past The Post
 - 3. Proportional Representation
 - 4. One Party System

Question ID : 264330173532
Option 1 ID : 264330680610
Option 2 ID : 264330680607
Option 3 ID : 264330680608
Option 4 ID : 264330680609
Status : Answered
Chosen Option : 3

Q.25 In which of the following years was the Indian National Congress founded, in Bombay?

- Ans
- 1. 1889
 - 2. 1880
 - 3. 1892
 - 4. 1885

Question ID : 264330113585
Option 1 ID : 264330446426
Option 2 ID : 264330446428
Option 3 ID : 264330446427
Option 4 ID : 264330446425
Status : Answered
Chosen Option : 4

Q.26 How many Rasas are presented in classical dances?

- Ans
- 1. 5
 - 2. 6
 - 3. 7
 - 4. 9

Question ID : 264330110410
Option 1 ID : 264330433917
Option 2 ID : 264330433919
Option 3 ID : 264330433918
Option 4 ID : 264330433920
Status : Answered
Chosen Option : 4

Q.27 Which is the first known instrument to measure the humidity of air or gas, built by Leonardo da Vinci around 1400?

- Ans
- 1. Transmissometer
 - 2. Disdrometer
 - 3. Sling psychrometer
 - 4. Hygrometer

Question ID : 264330141728
Option 1 ID : 264330555233
Option 2 ID : 264330555234
Option 3 ID : 264330555232
Option 4 ID : 264330555231
Status : Answered
Chosen Option : 4

Q.28 The Prayaga Prashasti (also known as the Allahabad Pillar Inscription) was composed in Sanskrit by Harishena, the court poet of:

- Ans
- 1. Kharavela
 - 2. Samudragupta
 - 3. Harshavardhana
 - 4. Asoka

Question ID : 264330119754
Option 1 ID : 264330469294
Option 2 ID : 264330469291
Option 3 ID : 264330469293
Option 4 ID : 264330469292
Status : Answered
Chosen Option : 2

Q.29 A small scale industry is defined with reference to the maximum investment allowed on assets which is equal to _____.

- Ans
- 1. ₹5 lakhs
 - 2. ₹1 crore
 - 3. ₹10 lakhs
 - 4. ₹10 crores

Question ID : 264330111552
Option 1 ID : 264330438293
Option 2 ID : 264330438294
Option 3 ID : 264330438295
Option 4 ID : 264330438296
Status : Answered
Chosen Option : 4

Q.30 Mera Houchongba is an important festival to celebrate peace in which Indian state?

- Ans
- 1. Assam
 - 2. Manipur
 - 3. Chhattisgarh
 - 4. Jharkhand

Question ID : 264330132407
Option 1 ID : 264330518726
Option 2 ID : 264330518723
Option 3 ID : 264330518725
Option 4 ID : 264330518724
Status : Answered
Chosen Option : 1

Q.31 Which of the following Articles has been inserted in the Indian Constitution by the Constitution (Eighty-Sixth Amendment) Act, 2002?

- Ans
- 1. Article 55-A
 - 2. Article 21-A
 - 3. Article 31-A
 - 4. Article 25-A

Question ID : 264330117797
Option 1 ID : 264330463004
Option 2 ID : 264330463005
Option 3 ID : 264330463003
Option 4 ID : 264330463006
Status : Answered
Chosen Option : 2

Q.32 The kinetic energy of the constitute molecules of the matter is minimum for its:

- Ans
- 1. liquid state
 - 2. plasma state
 - 3. gas state
 - 4. solid state

Question ID : 264330173650
Option 1 ID : 264330681080
Option 2 ID : 264330681082
Option 3 ID : 264330681079
Option 4 ID : 264330681081
Status : Answered
Chosen Option : 4

Q.33 'Bathukamma' is a colourful floral festival of _____ celebrated by womenfolk with exotic flowers of the region.

- Ans
- 1. Gujarat
 - 2. Telangana
 - 3. Rajasthan
 - 4. Karnataka

Question ID : 264330106207
Option 1 ID : 264330417130
Option 2 ID : 264330417129
Option 3 ID : 264330417131
Option 4 ID : 264330417132
Status : Answered
Chosen Option : 2

Q.34 The height of the net in volleyball for women must be _____.

- Ans
- 1. 2.24 m
 - 2. 2.15 m
 - 3. 2.10 m
 - 4. 2.43 m

Question ID : 264330110397
Option 1 ID : 264330433866
Option 2 ID : 264330433867
Option 3 ID : 264330433868
Option 4 ID : 264330433865
Status : Not Answered
Chosen Option : --

Q.35 How many questions were canvassed during Population Enumeration in the 2011 Census of India?

- Ans 1. 29
 2. 23
 3. 21
 4. 16

Question ID : 264330130588
Option 1 ID : 264330511466
Option 2 ID : 264330511463
Option 3 ID : 264330511464
Option 4 ID : 264330511465
Status : Not Answered
Chosen Option : --

Q.36 In which year was the 11th Fundamental duty added to the Indian Constitution?

- Ans 1. 2002
 2. 2001
 3. 2000
 4. 2003

Question ID : 264330114485
Option 1 ID : 264330450027
Option 2 ID : 264330450026
Option 3 ID : 264330450025
Option 4 ID : 264330450028
Status : Answered
Chosen Option : 1

Q.37 _____ tribe is one of India's largest tribal groups, according to the 2011 census.

- Ans 1. Kodava
 2. Bhil
 3. Khasi
 4. Bhutia

Question ID : 264330182969
Option 1 ID : 264330717611
Option 2 ID : 264330717608
Option 3 ID : 264330717609
Option 4 ID : 264330717610
Status : Answered
Chosen Option : 2

Q.38 Which layer of the atmosphere is suitable and most important to humans?

- Ans 1. Troposphere
 2. Exosphere
 3. Mesosphere
 4. Stratosphere

Question ID : 264330118514
Option 1 ID : 264330465457
Option 2 ID : 264330465460
Option 3 ID : 264330465459
Option 4 ID : 264330465458
Status : Answered
Chosen Option : 4

Q.39 As per the National Infrastructure Pipeline 2019-25, what is the share of energy sector projects out of the total estimated capital expenditure of ₹111 lakh crore?

- Ans
- 1. 17%
 - 2. 24%
 - 3. 37%
 - 4. 40%

Question ID : 264330120364
Option 1 ID : 264330471710
Option 2 ID : 264330471707
Option 3 ID : 264330471709
Option 4 ID : 264330471708
Status : Not Answered
Chosen Option : --

Q.40 Totaram Sharma is a famous _____ player.

- Ans
- 1. sarangi
 - 2. flute
 - 3. guitar
 - 4. pakhawaj

Question ID : 264330111941
Option 1 ID : 264330439849
Option 2 ID : 264330439850
Option 3 ID : 264330439852
Option 4 ID : 264330439851
Status : Answered
Chosen Option : 2

Q.41 What was India's rank in the medal tally at Tokyo Olympic 2020?

- Ans
- 1. 35
 - 2. 58
 - 3. 48
 - 4. 38

Question ID : 264330144212
Option 1 ID : 264330565107
Option 2 ID : 264330565110
Option 3 ID : 264330565109
Option 4 ID : 264330565108
Status : Answered
Chosen Option : 3

Q.42 Jeev Milkha Singh specialises in which event?

- Ans
- 1. Golf
 - 2. Weight lifting
 - 3. Shooting
 - 4. Athletics

Question ID : 264330119254
Option 1 ID : 264330467304
Option 2 ID : 264330467305
Option 3 ID : 264330467303
Option 4 ID : 264330467306
Status : Answered
Chosen Option : 4

Q.43 Identify the correct pair of Indian Dancers who received the Sangeet Natak Akademi Awards 2021 for their contributions in Bharatanatyam and Kathak, respectively.

- Ans
- 1. Trilochan Mohanta and Mamta Shankar
 - 2. Radha Sridhar and Kumkum Dhar
 - 3. Jayalakshmi Eshwar and Shama Bhate
 - 4. Geeta Chandran and Rajashree Shirke

Question ID : 264330130526
Option 1 ID : 264330511215
Option 2 ID : 264330511216
Option 3 ID : 264330511218
Option 4 ID : 264330511217
Status : Answered
Chosen Option : 3

Q.44 Deepa Sashindran, Raja Reddy and Radha Reddy are associated with which of the following Indian dances?

- Ans
- 1. Bharatanatyam
 - 2. Kathakali
 - 3. Kuchipudi
 - 4. Kathak

Question ID : 264330130511
Option 1 ID : 264330511158
Option 2 ID : 264330511156
Option 3 ID : 264330511155
Option 4 ID : 264330511157
Status : Answered
Chosen Option : 3

Q.45 Who produced the document of Mahzar at the instance of Akbar?

- Ans
- 1. Faizi
 - 2. Abul Fazi
 - 3. Shaikh Mubarak
 - 4. Abdun Nabi

Question ID : 264330120291
Option 1 ID : 264330471417
Option 2 ID : 264330471416
Option 3 ID : 264330471418
Option 4 ID : 264330471415
Status : Answered
Chosen Option : 1

Q.46 What is the State religion of Maldives?

- Ans
- 1. Christianity
 - 2. Buddhism
 - 3. Hinduism
 - 4. Islam

Question ID : 264330179302
Option 1 ID : 264330703211
Option 2 ID : 264330703214
Option 3 ID : 264330703212
Option 4 ID : 264330703213
Status : Answered
Chosen Option : 4

Q.47 The Public Accounts Committee consists of _____ members from Lok Sabha and _____ from Rajya Sabha.

- Ans 1. 15, 7
 2. 12, 10
 3. 13, 9
 4. 14, 8

Question ID : 264330110822
Option 1 ID : 264330435565
Option 2 ID : 264330435567
Option 3 ID : 264330435568
Option 4 ID : 264330435566
Status : Answered
Chosen Option : 1

Q.48 'Raseedi Ticket' is an autobiography written by:

- Ans 1. Khushwant Singh
 2. Baby Halder
 3. Amrita Pritam
 4. Ismat Chughtai

Question ID : 26433072942
Option 1 ID : 264330285962
Option 2 ID : 264330285960
Option 3 ID : 264330285961
Option 4 ID : 264330285963
Status : Not Answered
Chosen Option : --

Q.49 During the peak of the revolutionary phase of the Indian freedom struggle, an assassination attempt on a district magistrate of Muzaffarpur led to the uncovering of the Alipore Conspiracy in 1908. What was the name of the magistrate?

- Ans 1. Robert Lytton
 2. JP Saunders
 3. Douglas Kingsford
 4. Edward Irwin

Question ID : 264330119002
Option 1 ID : 264330466665
Option 2 ID : 264330466663
Option 3 ID : 264330466664
Option 4 ID : 264330466666
Status : Answered
Chosen Option : 3

Q.50 As a factor of cost, what is the other name of the net national product?

- Ans
- 1. Gross national product
 - 2. Net domestic product
 - 3. Personal income
 - 4. National income

Question ID : 264330120089
Option 1 ID : 264330470614
Option 2 ID : 264330470613
Option 3 ID : 264330470611
Option 4 ID : 264330470612
Status : Answered
Chosen Option : 4

Section : Reasoning

Q.1 Select the correct mirror image of the given combination when the mirror is placed at MN as shown below.

R d 4 7 c g

M
|
N

- Ans
- 1. g c 7 4 b R
 - 2. g c 7 4 b R
 - 3. g c 7 4 p R
 - 4. g c 7 4 b R

Question ID : 264330172418
Option 1 ID : 264330676224
Option 2 ID : 264330676223
Option 3 ID : 264330676225
Option 4 ID : 264330676226
Status : Answered
Chosen Option : 2

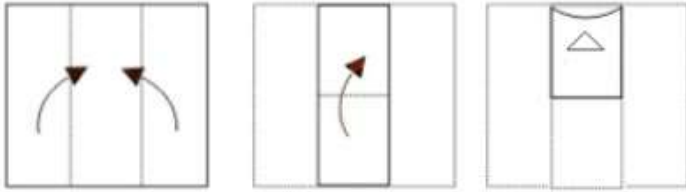
Q.2 Select the set in which the numbers are related in the same way as are the numbers of the following sets.

(NOTE: Operations should be performed on the whole numbers, without breaking down the numbers into its constituent digits. E.g. 13 – Operations on 13 such as adding/deleting/multiplying etc. to 13 can be performed. Breaking down 13 into 1 and 3 and then performing mathematical operations on 1 and 3 is not allowed)
(2, 9, 3), (5, 23, 4)

- Ans
- 1. (11, 40, 4)
 - 2. (10, 33, 3)
 - 3. (13, 36, 3)
 - 4. (12, 37, 4)


Question ID : 26433097191
Option 1 ID : 264330381461
Option 2 ID : 264330381464
Option 3 ID : 264330381463
Option 4 ID : 264330381462
Status : Answered
Chosen Option : 2

Q.3 A paper is folded and cut as shown below. How will it appear when unfolded?




Ans

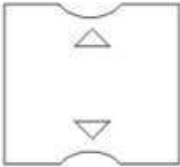
✓ 1.




✗ 2.



✗ 3.



✗ 4.



Question ID : 26433011707

Option 1 ID : 264330438914

Option 2 ID : 264330438913

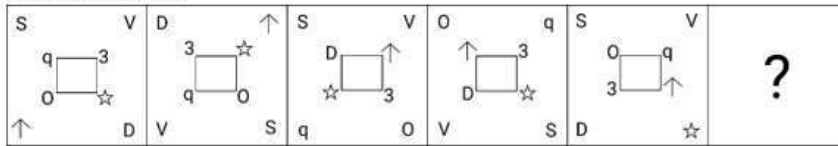
Option 3 ID : 264330438916

Option 4 ID : 264330438915

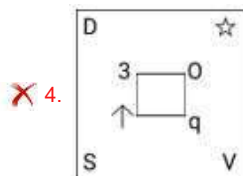
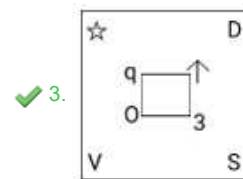
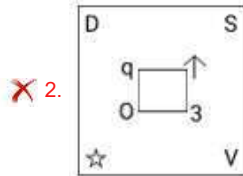
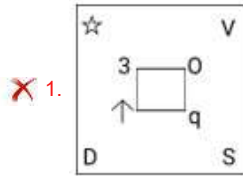
Status : Answered

Chosen Option : 1

Q.4 Which figure should replace the question mark (?) if the following series were to be continued?



Ans



Question ID : 264330103854

Option 1 ID : 264330407718

Option 2 ID : 264330407719

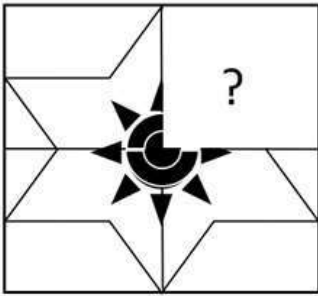
Option 3 ID : 264330407717

Option 4 ID : 264330407720

Status : Answered

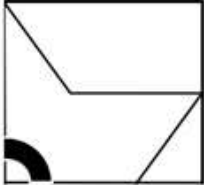
Chosen Option : 3

Q.5 Select the figure from the options that can replace the question mark (?) and complete the given pattern.



Ans


✗ 1.



✓ 2.



✗ 3.



✗ 4.



Question ID : 26433082916
 Option 1 ID : 264330325499
 Option 2 ID : 264330325498
 Option 3 ID : 264330325500
 Option 4 ID : 264330325497
 Status : Answered
 Chosen Option : 2

Q.6 In a certain code language, 'RADICAL' is written as 'BBDEJMS' and 'SUSPECT' is written as 'DFQTTUV'. How will 'VIRTUAL' be written in that language?

Ans ✓ 1. BJMSUVW

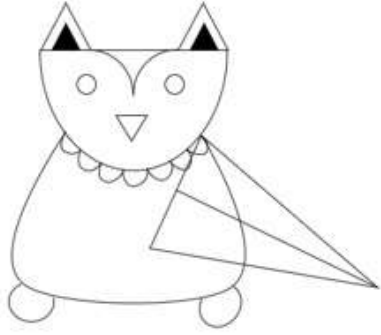
✗ 2. LAUTRIV

✗ 3. RIVTLAU

✗ 4. WJSUVBM

Question ID : 26433087175
 Option 1 ID : 264330342338
 Option 2 ID : 264330342340
 Option 3 ID : 264330342339
 Option 4 ID : 264330342337
 Status : Answered
 Chosen Option : 1

Q.7 How many triangles are there in the given figure?



- Ans
- 1. 10
 - 2. 8
 - 3. 9
 - 4. 6

Question ID : 26433085580

Option 1 ID : 264330336024

Option 2 ID : 264330336022

Option 3 ID : 264330336023

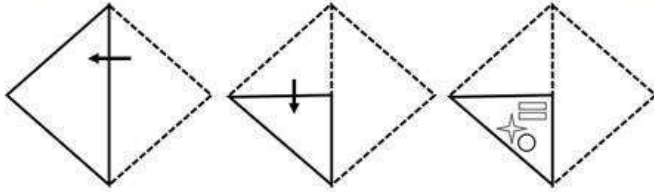
Option 4 ID : 264330336021

Status : Answered

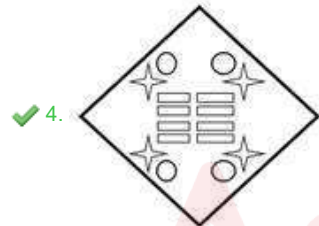
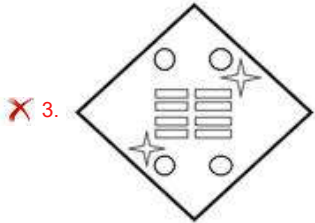
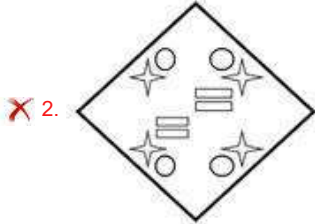
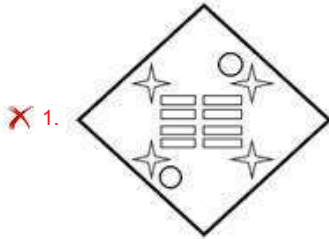
Chosen Option : 2



Q.8 A paper is folded and cut as shown below. How will it appear when unfolded?



Ans



Question ID : 26433076503

Option 1 ID : 264330300079

Option 2 ID : 264330300076

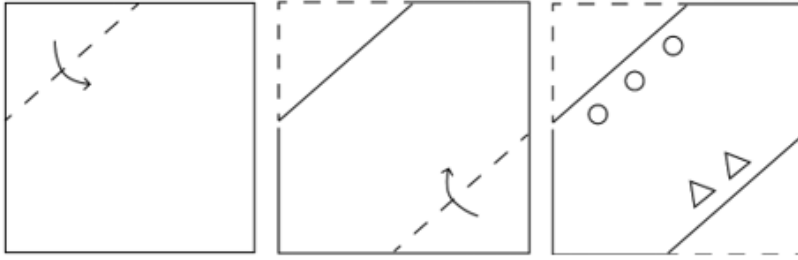
Option 3 ID : 264330300078

Option 4 ID : 264330300077

Status : Answered

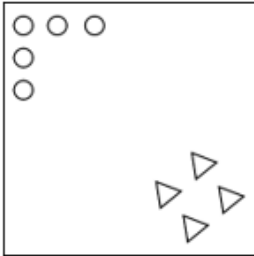
Chosen Option : 4

Q.9 A square sheet of paper is folded along the dotted line successively along the directions shown and is then punched in the last. How would the paper look when unfolded?

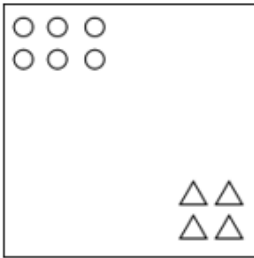


Ans

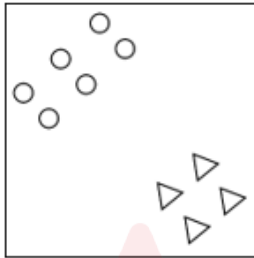
1.



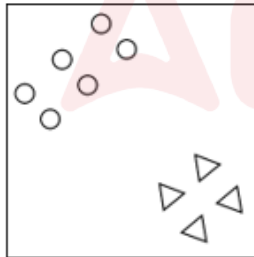
2.



3.



4.



Question ID : 264330172409

Option 1 ID : 264330676188

Option 2 ID : 264330676189

Option 3 ID : 264330676187

Option 4 ID : 264330676190

Status : Answered

Chosen Option : 4

Q.10 Which figure should replace the question mark (?) in the following series to continue the pattern?

△	8	↑	♡	♡	U	K	8	
B	U	L	K	△	L	U	8	B ↑ L △ ♡ L ↑ U
↑	♡	B	K	K	8	B	△	?

Ans

1.

♡	K
U	B
L	8
△	↑

2.

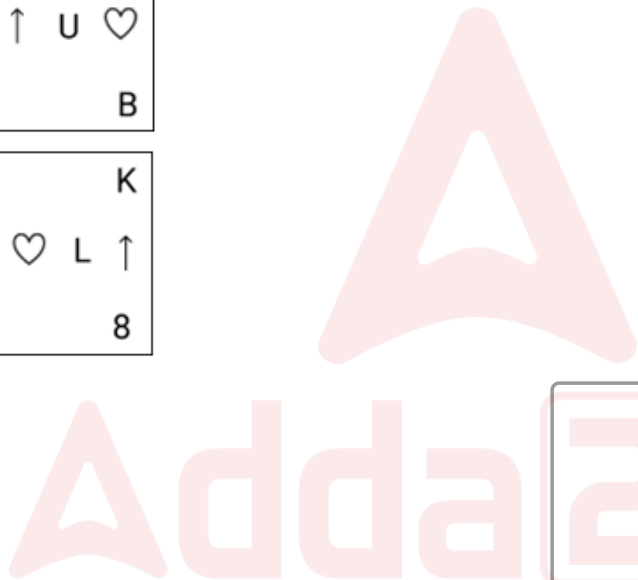
8	↑
B	K
L	♡
△	U

3.

8	△
L	↑
U	♡
K	B

4.

B	K
U	♡
L	↑
△	8



Question ID : 264330129620
 Option 1 ID : 264330507847
 Option 2 ID : 264330507846
 Option 3 ID : 264330507849
 Option 4 ID : 264330507848
 Status : Answered
 Chosen Option : 1

Q.11 Read the given statements and conclusions carefully. Assuming that the information given in the statements is true, even if it appears to be at variance with commonly known facts, decide which of the given conclusions logically follow(s) from the statements.

Statements:

All students are teachers.

No teacher is the Principal.

Conclusions:

I. No principal is student.

II. All teachers are students.

- Ans**
- 1. Neither conclusion I nor II follows
 - 2. Both conclusions I and II follow
 - 3. Only conclusion I follows
 - 4. Only conclusion II follows

Question ID : 26433068291

Option 1 ID : 264330267679

Option 2 ID : 264330267678

Option 3 ID : 264330267676

Option 4 ID : 264330267677

Status : Answered

Chosen Option : 3

Q.12 Select the correct combination of mathematical signs that can sequentially replace the * signs and balance the given equation.

$$15 * 3 * 24 * 12 * 2 * 5$$

- Ans**
- 1. +, x, -, =, ÷
 - 2. +, -, x, ÷, =
 - 3. +, x, -, ÷, =
 - 4. ÷, +, -, x, =

Question ID : 26433079090

Option 1 ID : 264330310366

Option 2 ID : 264330310367

Option 3 ID : 264330310364

Option 4 ID : 264330310365

Status : Answered

Chosen Option : 4

Q.13 Select the option in which the given figure is embedded (rotation is NOT allowed).



Ans

- 1.
- 2.
- 3.
- 4.

Question ID : 264330111670

Option 1 ID : 264330438765

Option 2 ID : 264330438766

Option 3 ID : 264330438768

Option 4 ID : 264330438767

Status : Answered

Chosen Option : 3

Q.14 Select the correct mirror image of the given figure when the mirror is placed at MN as shown below.

F k Z 5 L P y

M ——— N

Ans

- 1. E K Σ 2 Γ b λ
- 2. E K Σ 2 Γ b λ
- 3. E K Σ 2 Γ b λ
- 4. v 9 J 2 Σ K F

Question ID : 26433080788

Option 1 ID : 264330317086

Option 2 ID : 264330317085

Option 3 ID : 264330317087

Option 4 ID : 264330317088

Status : Answered

Chosen Option : 3

Q.15 Select the option that is related to the third word in the same way as the second word is related to the first word. (The words must be considered as meaningful English words and must NOT be related to each other based on the number of letters/number of consonants/vowels in the word)

Brim: Edge:: Kind:?

- Ans
- 1. Artificial
 - 2. Benevolent
 - 3. Illusion
 - 4. Cruel

Question ID : 26433069171
Option 1 ID : 264330271198
Option 2 ID : 264330271196
Option 3 ID : 264330271199
Option 4 ID : 264330271197
Status : Answered
Chosen Option : 4

Q.16 Which of the following options will replace the question mark (?) in the given series?
3, 8, 18, 33, 53, ?, 108

- Ans
- 1. 55
 - 2. 53
 - 3. 78
 - 4. 39

Question ID : 264330109434
Option 1 ID : 264330430014
Option 2 ID : 264330430016
Option 3 ID : 264330430013
Option 4 ID : 264330430015
Status : Answered
Chosen Option : 3

Q.17 Select the correct mirror image of the given figure when the mirror is placed at MN as shown below.

T M p 5 D c

M _____ N

- Ans
- 1. T W b 5 D c
 - 2. T M b 2 D c
 - 3. T W d 2 D c
 - 4. T W b 2 D c

Question ID : 26433080789
Option 1 ID : 264330317089
Option 2 ID : 264330317092
Option 3 ID : 264330317091
Option 4 ID : 264330317090
Status : Answered
Chosen Option : 4

Q.18 Select the correct mirror image of the given combination when the mirror is placed at MN as shown below.

P 6 w d 9 K r



- Ans
- 1. q 9 w p e k r
 - 2. r k e b w a q
 - 3. r w a b k e q
 - 4. r k e p w a q

Question ID : 264330117000

Option 1 ID : 264330460084

Option 2 ID : 264330460083

Option 3 ID : 264330460082

Option 4 ID : 264330460081

Status : Answered

Chosen Option : 2

Q.19 Select the option that is related to the fifth number in the same way as the second number is related to the first number and the fourth number is related to the third number.

45 : 405 :: 20 : 80 :: 85 : ?

- Ans
- 1. 1270
 - 2. 1255
 - 3. 1445
 - 4. 1440

Question ID : 264330102516

Option 1 ID : 264330402496

Option 2 ID : 264330402495

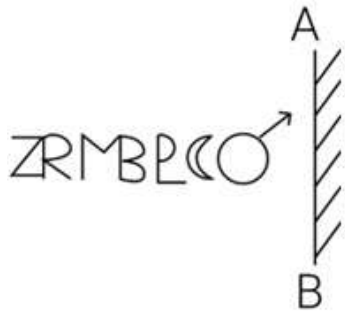
Option 3 ID : 264330402494

Option 4 ID : 264330402493

Status : Answered

Chosen Option : 3

Q.20 Select the correct mirror image of the given figure when the mirror is placed at 'AB' as shown.



Ans

- 1.
- 2.
- 3.
- 4.

Question ID : 264330114692

Option 1 ID : 264330450853

Option 2 ID : 264330450854

Option 3 ID : 264330450855

Option 4 ID : 264330450856

Status : Answered

Chosen Option : 4

Q.21 Select the option that represents the letters that, when sequentially placed from left to right in the blanks below, will complete the letter series.

M N _ _ Q M _ O _ Q _ N _ P Q M N O _ _

- 1. PONPMOQP
- 2. OPNPMOPQ
- 3. OPPNMOQP
- 4. PONPOMPQ

Question ID : 26433095979

Option 1 ID : 264330376687

Option 2 ID : 264330376686

Option 3 ID : 264330376688

Option 4 ID : 264330376685

Status : Answered

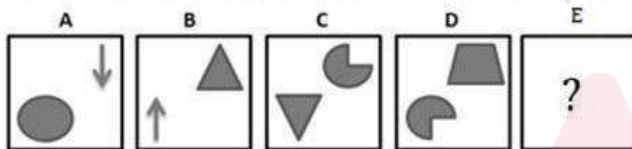
Chosen Option : 2

Q.22 Seven students, A, B, C, D, E, F and G, are standing in a straight line facing north. D is standing to the immediate left of E but to the immediate right of C. B is standing to the immediate right of A and to the immediate left of C. Similarly, F is standing to the immediate left of G, who is standing at the extreme right end. Who is standing at the third position from the left end?

- Ans
- 1. B
 - 2. E
 - 3. D
 - 4. C

Question ID : 26433089546
 Option 1 ID : 264330351685
 Option 2 ID : 264330351688
 Option 3 ID : 264330351686
 Option 4 ID : 264330351687
 Status : Answered
 Chosen Option : 4

Q.23 Following question consists of 4 figures marked A, B, C and D called the Problem Figures. Select a figure from amongst the Answer Figures which will continue the same series as established by the four Problem Figures.

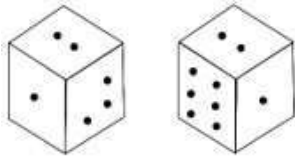


Ans

- 1.
- 2.
- 3.
- 4.

Question ID : 264330110534
 Option 1 ID : 264330434416
 Option 2 ID : 264330434414
 Option 3 ID : 264330434413
 Option 4 ID : 264330434415
 Status : Answered
 Chosen Option : 2

Q.24 Observe the dots on a dice (one to six dots) in the following figures. How many dots are contained on the face opposite to that containing six dots?



- Ans
- 1. One
 - 2. Three
 - 3. Five
 - 4. Four

Question ID : 26433011299
Option 1 ID : 264330437284
Option 2 ID : 264330437282
Option 3 ID : 264330437283
Option 4 ID : 264330437281
Status : Answered
Chosen Option : 2

Q.25 If 'A' denotes '+', 'B' denotes 'x', 'C' denotes '-' and 'D' denotes '÷', then what will come in place of '?' in the following equation?
(8 B 4 A 3) D 7 = 33 D 11 A?

- Ans
- 1. 9
 - 2. 2
 - 3. 5
 - 4. 7

Question ID : 26433082473
Option 1 ID : 264330323725
Option 2 ID : 264330323728
Option 3 ID : 264330323727
Option 4 ID : 264330323726
Status : Answered
Chosen Option : 2

Section : Numerical Ability

Q.1 The distance between two cities A and B is 480 km. A car starts from A at $\frac{3}{5}$ of its original speed and reaches B late by 80 minutes than its scheduled time. Find the original speed of the car (in km/h).

- Ans
- 1. 240
 - 2. 235
 - 3. 230
 - 4. 242

Question ID : 264330119528
Option 1 ID : 264330468395
Option 2 ID : 264330468398
Option 3 ID : 264330468396
Option 4 ID : 264330468397
Status : Answered
Chosen Option : 1

Q.2 The least number which, when divided by 15,30 and 45, leaves a remainder of 8 in each case is:

- Ans
- 1. 94
 - 2. 113
 - 3. 83
 - 4. 98

Question ID : 264330104147
Option 1 ID : 264330408890
Option 2 ID : 264330408892
Option 3 ID : 264330408889
Option 4 ID : 264330408891
Status : Answered
Chosen Option : 4

Q.3 Find the largest positive integer that will divide 216, 358 and 454 leaving remainder 9, 13 and 17, respectively.

- Ans
- 1. 23
 - 2. 29
 - 3. 27
 - 4. 17

Question ID : 264330118408
Option 1 ID : 264330465034
Option 2 ID : 264330465036
Option 3 ID : 264330465033
Option 4 ID : 264330465035
Status : Answered
Chosen Option : 1

Q.4 The ratio of the incomes of Ram and Ganga is 3 : 4 and the ratio of their expenditures is 2 : 3. If each person saves ₹2,000, then what is the ratio of their total income together to their total expenditure together?

- Ans
- 1. 5 : 3
 - 2. 7 : 5
 - 3. 3 : 2
 - 4. 1 : 2

Question ID : 264330106487
Option 1 ID : 264330418251
Option 2 ID : 264330418252
Option 3 ID : 264330418250
Option 4 ID : 264330418249
Status : Answered
Chosen Option : 2

Q.5 G invested ₹x in a scheme which gives 12% return. Finally, he received ₹12,000 more amount than the invested amount. How much money (in ₹) did he invest in the scheme?

- Ans
- 1. 120000
 - 2. 100000
 - 3. 112000
 - 4. 80000

Question ID : 264330112085
Option 1 ID : 264330440427
Option 2 ID : 264330440426
Option 3 ID : 264330440428
Option 4 ID : 264330440425
Status : Answered
Chosen Option : 2

Q.6 A sum was invested on simple interest at a certain rate for 3 years. Had it been put at 5% higher rate, it would have fetched ₹270 more interest. The sum invested was:

- Ans
- 1. ₹2,000
 - 2. ₹1,500
 - 3. ₹1,800
 - 4. ₹1,700

Question ID : 264330118424
Option 1 ID : 264330465100
Option 2 ID : 264330465097
Option 3 ID : 264330465099
Option 4 ID : 264330465098
Status : Answered
Chosen Option : 3

Q.7 Find the yearly rate of compound interest at which ₹2,400 amounts to ₹3,650.10 in a duration of 3 years.

- Ans
- 1. 14%
 - 2. 15%
 - 3. 13%
 - 4. 12%

Question ID : 264330103983
Option 1 ID : 264330408235
Option 2 ID : 264330408236
Option 3 ID : 264330408234
Option 4 ID : 264330408233
Status : Answered
Chosen Option : 2

Q.8 A and B individually can finish a work in 15 and 20 days, respectively. If B starts the work on 1 October, and they work on alternate days, the work will be finished on:

- Ans
- 1. 14 October
 - 2. 19 October
 - 3. 18 October
 - 4. 9 October

Question ID : 264330103747
Option 1 ID : 264330407296
Option 2 ID : 264330407294
Option 3 ID : 264330407295
Option 4 ID : 264330407293
Status : Answered
Chosen Option : 3

Q.9 Find the value of $[0.7 - \{4.3 - 3.6 - (6.1 - 4.7 - 2.3)\}]$.

- Ans
- 1. $-\frac{9}{10}$
 - 2. $\frac{8}{10}$
 - 3. $\frac{6}{10}$
 - 4. $\frac{7}{10}$

Question ID : 264330118410
Option 1 ID : 264330465043
Option 2 ID : 264330465042
Option 3 ID : 264330465041
Option 4 ID : 264330465044
Status : Answered
Chosen Option : 1

Q.10 The ratio of the numbers of boys and girls in a school is 6 : 5. If 25% of the boys and 36% of the girls are scholarship holders, then the percentage of students who DO NOT get scholarship is:

- Ans
- 1. 50%
 - 2. 60%
 - 3. 80%
 - 4. 70%

Question ID : 264330104294
Option 1 ID : 264330409479
Option 2 ID : 264330409477
Option 3 ID : 264330409480
Option 4 ID : 264330409478
Status : Answered
Chosen Option : 4

Q.11 The average of two numbers is 24 and the average of three other numbers is 29. What is the average of these five numbers?

- Ans
- 1. 28
 - 2. 25
 - 3. 26
 - 4. 27

Question ID : 264330131121
Option 1 ID : 264330513598
Option 2 ID : 264330513595
Option 3 ID : 264330513596
Option 4 ID : 264330513597
Status : Answered
Chosen Option : 4

Q.12 In the year 2001, the production of a factory decreased by 30%. But, in 2002, the production increased by 25%. What is the resulting change (increase or decrease) in production over these two years?

- Ans
- 1. Increase by 13.5%
 - 2. Increase by 12.5%
 - 3. Decrease by 13.5%
 - 4. Decrease by 12.5%

Question ID : 264330177576
Option 1 ID : 264330696422
Option 2 ID : 264330696420
Option 3 ID : 264330696421
Option 4 ID : 264330696419
Status : Answered
Chosen Option : 4

Q.13 A shopkeeper marked his items with prices 65% more than their cost price and allowed a discount of 35%. Find the percentage of his profit.

- Ans
- 1. 9.50%
 - 2. 8.65%
 - 3. 7.25%
 - 4. 10.25%

Question ID : 264330131523
Option 1 ID : 264330515195
Option 2 ID : 264330515198
Option 3 ID : 264330515196
Option 4 ID : 264330515197
Status : Answered
Chosen Option : 3

Q.14 Find the cost of painting a spherical ball of radius 14 cm at the rate of ₹10 per cm^2 . (Use $\pi = \frac{22}{7}$)

- Ans
- ✓ 1. ₹24,640
 - ✗ 2. ₹20,220
 - ✗ 3. ₹24,250
 - ✗ 4. ₹22,350

Question ID : 264330109527
Option 1 ID : 264330430386
Option 2 ID : 264330430385
Option 3 ID : 264330430388
Option 4 ID : 264330430387
Status : Answered
Chosen Option : 1

Q.15 How many metres of cloth, 6 m wide, will be required to make a conical tent, the radius of whose base is 6 m and height is 8 m? (Assume there is no wastage of material)

(Take $\pi = \frac{22}{7}$)

- Ans
- ✓ 1. $31\frac{3}{7}$
 - ✗ 2. $31\frac{2}{7}$
 - ✗ 3. $31\frac{4}{7}$
 - ✗ 4. $31\frac{1}{7}$

Question ID : 264330112435
Option 1 ID : 264330441826
Option 2 ID : 264330441827
Option 3 ID : 264330441825
Option 4 ID : 264330441828
Status : Answered
Chosen Option : 1

Section : Computer Proficiency

Q.1 In MS word 365 Which of the following keyboard shortcut keys is used to open new blank documents?

- Ans
- ✓ 1. Ctrl + N
 - ✗ 2. Shift + O
 - ✗ 3. Alt + O
 - ✗ 4. Ctrl + O

Question ID : 264330178275
Option 1 ID : 264330699156
Option 2 ID : 264330699157
Option 3 ID : 264330699158
Option 4 ID : 264330699155
Status : Answered
Chosen Option : 1

Q.2 Which of the following alignments will give your text straight edges on both sides of the paragraph and extends each line of your text to the left and right margins in MS Word 365?

- Ans**
- 1. Justify
 - 2. Right alignment
 - 3. Center
 - 4. Left alignment

Question ID : 264330180440
Option 1 ID : 264330707729
Option 2 ID : 264330707728
Option 3 ID : 264330707730
Option 4 ID : 264330707727
Status : Answered
Chosen Option : 1

Q.3 Which of the following statements is correct about the row height of the cell in a spreadsheet in MS-Excel 2010?

- Ans**
- 1. Upper and lower bounds for row heights are 509 and 0, respectively.
 - 2. Upper and lower bounds for row heights are 709 and 0, respectively.
 - 3. Upper and lower bounds for row heights are 609 and 0, respectively.
 - 4. Upper and lower bounds for row heights are 409 and 0, respectively.

Question ID : 264330176692
Option 1 ID : 264330692986
Option 2 ID : 264330692983
Option 3 ID : 264330692984
Option 4 ID : 264330692985
Status : Answered
Chosen Option : 4

Q.4 Which of the following is a type of internet connection that uses a telephone line for data transmission?

- Ans**
- 1. Satellite
 - 2. Broadband
 - 3. Dial up
 - 4. Fibre optic

Question ID : 264330180805
Option 1 ID : 264330709186
Option 2 ID : 264330709183
Option 3 ID : 264330709185
Option 4 ID : 264330709184
Status : Answered
Chosen Option : 4

Q.5 Among the following, under which tab will you find the Start Mail Merge in the Microsoft Office Professional Plus 2016?

- Ans
- 1. References
 - 2. Insert
 - 3. Mailings
 - 4. Home

Question ID : 264330171412
Option 1 ID : 264330672265
Option 2 ID : 264330672264
Option 3 ID : 264330672266
Option 4 ID : 264330672263
Status : Answered
Chosen Option : 3

Q.6 Which of the following is an option present in Paragraph Formatting in MS Word 365?

- Ans
- 1. Save
 - 2. Line spacing
 - 3. Replace
 - 4. Find

Question ID : 264330180425
Option 1 ID : 264330707669
Option 2 ID : 264330707667
Option 3 ID : 264330707670
Option 4 ID : 264330707668
Status : Answered
Chosen Option : 2

Q.7 What does the cell address 'C10' represent in an electronic spreadsheet?

- Ans
- 1. The cell in the twelfth column and the third row
 - 2. The cell in the tenth column and the third row
 - 3. The cell in the third column and the tenth row
 - 4. The cell in the third column and the twelfth row

Question ID : 264330174487
Option 1 ID : 264330684368
Option 2 ID : 264330684369
Option 3 ID : 264330684367
Option 4 ID : 264330684370
Status : Answered
Chosen Option : 3

Q.8 Which of the following keyboard shortcuts is used to increase the size of the selected text in MS-Word 365?

- Ans
- 1. Ctrl +]
 - 2. Ctrl + <
 - 3. Ctrl + ?
 - 4. Ctrl + +

Question ID : 264330178286
Option 1 ID : 264330699201
Option 2 ID : 264330699202
Option 3 ID : 264330699199
Option 4 ID : 264330699200
Status : Answered
Chosen Option : 1

Q.9 Which of the following is a secret string of characters used to verify the identity of a user during the authentication process?

- Ans**
- 1. Password
 - 2. Domain name
 - 3. Username
 - 4. Website

Question ID : 264330180378
Option 1 ID : 264330707480
Option 2 ID : 264330707479
Option 3 ID : 264330707481
Option 4 ID : 264330707482
Status : Answered
Chosen Option : 3

Q.10 In MS Excel, which of the following is the correct cell address of the second column and third row?

- Ans**
- 1. 3A
 - 2. 3B
 - 3. A3
 - 4. B3

Question ID : 264330180811
Option 1 ID : 264330709210
Option 2 ID : 264330709208
Option 3 ID : 264330709207
Option 4 ID : 264330709209
Status : Answered
Chosen Option : 4

Adda247

Constable Executive Male and Female in Delhi Police Examination 2023

Roll Number	
Candidate Name	
Venue Name	iON Digital Zone iDZ Shahpur
Exam Date	22/11/2023
Exam Time	12:00 PM - 1:30 PM
Subject	Constable Executive Male and Female in Delhi Police Examination 2023

Section : General Knowledge

Q.1 Who among the following novelists has written 'A Suitable Boy'?

- Ans
- 1. Aravind Adiga
 - 2. Vikram Seth
 - 3. Arundhati Roy
 - 4. Chetan Bhagat

Question ID : 26433086910
Option 1 ID : 264330341282
Option 2 ID : 264330341284
Option 3 ID : 264330341281
Option 4 ID : 264330341283
Status : Answered
Chosen Option : 2

Q.2 Minati Mishra was conferred the Padma Shree for her contribution to which form of dance?

- Ans
- 1. Chhau
 - 2. Sattriya
 - 3. Bihu
 - 4. Odissi

Question ID : 26433074882
Option 1 ID : 264330293617
Option 2 ID : 264330293616
Option 3 ID : 264330293619
Option 4 ID : 264330293618
Status : Answered
Chosen Option : 3

Q.3 The Lakshmana temple of Khajuraho, dedicated to Lord Vishnu, is an example of which style of temple architecture?

- Ans
- 1. Vesara
 - 2. Nagara
 - 3. Dravidian
 - 4. Odisha

Question ID : 264330111854
Option 1 ID : 264330439501
Option 2 ID : 264330439503
Option 3 ID : 264330439502
Option 4 ID : 264330439504
Status : Answered
Chosen Option : 1

Q.4 Consider the following methods adopted by the government to protect goods produced in India from imports.

(i) Heavy taxes were levied on imported goods

(ii) The maximum limit on the imports of a commodity by a domestic user was fixed

Choose the correct answer.

- Ans**
- 1. Both (i) and (ii) are true
 - 2. Both (i) and (ii) are false
 - 3. Only (ii) is true
 - 4. Only (i) is true

Question ID : 264330116525

Option 1 ID : 264330458186

Option 2 ID : 264330458185

Option 3 ID : 264330458188

Option 4 ID : 264330458187

Status : Answered

Chosen Option : 1

Q.5 Which of the following is a popular festival celebrated in the state of Bihar?

- Ans**
- 1. Me-Dam-Me-Phi
 - 2. Sama Chakeva
 - 3. Harela
 - 4. Ali-Ai-Ligang

Question ID : 264330110455

Option 1 ID : 264330434099

Option 2 ID : 264330434098

Option 3 ID : 264330434100

Option 4 ID : 264330434097

Status : Answered

Chosen Option : 2

Q.6 Which region of India is known for the unique Shola forests?

- Ans**
- 1. Eastern Himalayas
 - 2. Western Ghats
 - 3. Thar Desert
 - 4. Deccan Plateau

Question ID : 264330176015

Option 1 ID : 264330690356

Option 2 ID : 264330690357

Option 3 ID : 264330690355

Option 4 ID : 264330690358

Status : Answered

Chosen Option : 4

Q.7 The Ghoomar dance of Rajasthan was originally performed by which tribal community?

- Ans
- 1. Kathodi
 - 2. Mina
 - 3. Bhil
 - 4. Kanjar

Question ID : 264330141327
Option 1 ID : 264330553643
Option 2 ID : 264330553646
Option 3 ID : 264330553645
Option 4 ID : 264330553644
Status : Answered
Chosen Option : 3

Q.8 Who among the following was appointed as the first minister of the Ministry of Disinvestment during the tenure of the Vajpayee Government?

- Ans
- 1. Yashwant Sinha
 - 2. Arun Shourie
 - 3. George Fernandes
 - 4. Jaswant Singh

Question ID : 26433059342
Option 1 ID : 264330232245
Option 2 ID : 264330232244
Option 3 ID : 264330232247
Option 4 ID : 264330232246
Status : Answered
Chosen Option : 2

Q.9 Which of the following states is related to Gatka, which was inducted into the 37th National Games?

- Ans
- 1. Punjab
 - 2. Uttar Pradesh
 - 3. Haryana
 - 4. Uttarakhand

Question ID : 264330176923
Option 1 ID : 264330693887
Option 2 ID : 264330693889
Option 3 ID : 264330693888
Option 4 ID : 264330693890
Status : Answered
Chosen Option : 4

Q.10 Which of the following dances was traditionally performed by male monks in monasteries?

- Ans 1. Sattriya
 2. Kathakali
 3. Kuchipudi
 4. Odissi

Question ID : 264330110404
Option 1 ID : 264330433894
Option 2 ID : 264330433896
Option 3 ID : 264330433895
Option 4 ID : 264330433893
Status : Answered
Chosen Option : 1

Q.11 Which of the following Articles of the Constitution of India mentions that Parliament by law can form a new State by separation of territory from any state or by uniting any territory to a part of any State?

- Ans 1. Article 9
 2. Article 5
 3. Article 7
 4. Article 3

Question ID : 264330110775
Option 1 ID : 264330435380
Option 2 ID : 264330435377
Option 3 ID : 264330435378
Option 4 ID : 264330435379
Status : Answered
Chosen Option : 4

Q.12 According to the census of India 2011, what was the literacy rate of Tamil Nadu?

- Ans 1. 82.80%
 2. 82.34%
 3. 80.09%
 4. 81.42%

Question ID : 264330119913
Option 1 ID : 264330469929
Option 2 ID : 264330469928
Option 3 ID : 264330469930
Option 4 ID : 264330469927
Status : Not Answered
Chosen Option : --

Q.13 Which of the following is NOT one of the several approaches of microfinance delivery mechanisms in India?

- Ans**
- 1. Cheap subsidised credit
 - 2. Self-help-group – bank linkage programme
 - 3. Microfinance institutions- Credit Lending Models
 - 4. Conventional weaker-section lending by banks

Question ID : 264330119670
Option 1 ID : 264330468955
Option 2 ID : 264330468958
Option 3 ID : 264330468957
Option 4 ID : 264330468956
Status : Answered
Chosen Option : 4

Q.14 Under which of the following Articles of the Constitution of India does the Governor of Arunachal Pradesh have special responsibility with respect to law and order and in discharge of his functions in relation thereto?

- Ans**
- 1. Article 371 D
 - 2. Article 371 H
 - 3. Article 371 A
 - 4. Article 371 G

Question ID : 26433086856
Option 1 ID : 264330341067
Option 2 ID : 264330341065
Option 3 ID : 264330341068
Option 4 ID : 264330341066
Status : Answered
Chosen Option : 1

Q.15 Which of the following words is not part of Article 15 of the Indian Constitution as far as grounds of discrimination are concerned?

- Ans**
- 1. Race
 - 2. Profession
 - 3. Caste
 - 4. Religion

Question ID : 264330180043
Option 1 ID : 264330706156
Option 2 ID : 264330706158
Option 3 ID : 264330706157
Option 4 ID : 264330706155
Status : Answered
Chosen Option : 2

Q.16 Which National Waterway is associated with the Brahmaputra River?

- Ans
- 1. National Waterway 1
 - 2. National Waterway 3
 - 3. National Waterway 2
 - 4. National Waterway 5

Question ID : 264330180505
Option 1 ID : 264330707990
Option 2 ID : 264330707988
Option 3 ID : 264330707989
Option 4 ID : 264330707987
Status : Answered
Chosen Option : 3

Q.17 Which of the following channels is NOT a part of six communication mail channels to facilitate quick delivery of mails in large towns and cities of India?

- Ans
- 1. Periodical channel
 - 2. Business channel
 - 3. Weekly channel
 - 4. Metro channel

Question ID : 264330180510
Option 1 ID : 264330708007
Option 2 ID : 264330708009
Option 3 ID : 264330708008
Option 4 ID : 264330708010
Status : Answered
Chosen Option : 2

Q.18 Which common long-term infection develops when bacteria in the mouth metabolise sugars to produce acids that demineralise the hard tissues of teeth?

- Ans
- 1. Dental caries
 - 2. Cleft palate
 - 3. Oro-dental trauma
 - 4. Oral thrush

Question ID : 264330130985
Option 1 ID : 264330513051
Option 2 ID : 264330513052
Option 3 ID : 264330513053
Option 4 ID : 264330513054
Status : Not Answered
Chosen Option : --

Q.19 Dehing Patkai festival is the festival to celebrate the rich culture of which of the following Indian states?

- Ans
- 1. Nagaland
 - 2. Sikkim
 - 3. Tripura
 - 4. Assam

Question ID : 264330132417
Option 1 ID : 264330518763
Option 2 ID : 264330518766
Option 3 ID : 264330518765
Option 4 ID : 264330518764
Status : Answered
Chosen Option : 4

Q.20 The Sikhs under Guru Hargobind defeated the Mughals four times during the reign of

- Ans
- 1. Aurangzeb
 - 2. Jahangir
 - 3. Akbar
 - 4. Shah Jahan

Question ID : 264330114845
Option 1 ID : 264330451466
Option 2 ID : 264330451467
Option 3 ID : 264330451465
Option 4 ID : 264330451468
Status : Answered
Chosen Option : 4

Q.21 In which part of the Constitution of India is the procedure for amendments in the Constitution laid down?

- Ans
- 1. Part XV
 - 2. Part XXI
 - 3. Part XX
 - 4. Part X

Question ID : 264330113367
Option 1 ID : 264330445554
Option 2 ID : 264330445555
Option 3 ID : 264330445556
Option 4 ID : 264330445553
Status : Answered
Chosen Option : 3

Q.22 What is the air temperature at tropopause over the equator?

- Ans
- 1. -60°C
 - 2. -50°C
 - 3. -80°C
 - 4. -70°C

Question ID : 264330120077
Option 1 ID : 264330470563
Option 2 ID : 264330470564
Option 3 ID : 264330470565
Option 4 ID : 264330470566
Status : Answered
Chosen Option : 1

Q.23 Who among the following is called the 'Bhajan Samrat' of India?

- Ans
- 1. Anup Jalota
 - 2. Dayanand Prajapati
 - 3. Sanjeev Abhyankar
 - 4. Vishnu Bharnagar

Question ID : 264330112680
Option 1 ID : 264330442806
Option 2 ID : 264330442807
Option 3 ID : 264330442805
Option 4 ID : 264330442808
Status : Answered
Chosen Option : 4

Q.24 In which of the following States was the 44th Chess Olympiad held?

Ans 1. Tamil Nadu

2. Andhra Pradesh

3. Kerala

4. Karnataka

Question ID : 264330113753

Option 1 ID : 264330447097

Option 2 ID : 264330447099

Option 3 ID : 264330447098

Option 4 ID : 264330447100

Status : Not Answered

Chosen Option : --

Q.25 Mame Khan, an Indian folk singer known for his Sufi and folk music performances, is from the state of _____.

Ans 1. Rajasthan

2. Punjab

3. Assam

4. Gujarat

Question ID : 264330114169

Option 1 ID : 264330448763

Option 2 ID : 264330448762

Option 3 ID : 264330448764

Option 4 ID : 264330448761

Status : Answered

Chosen Option : 2

Q.26 Globalisation, by connecting countries, shall result in _____.

Ans 1. price enhancement by producers

2. no change in competition among producers

3. lesser competition among producers

4. greater competition among producers

Question ID : 26433082241

Option 1 ID : 264330322799

Option 2 ID : 264330322800

Option 3 ID : 264330322798

Option 4 ID : 264330322797

Status : Answered

Chosen Option : 4

Q.27 Which Article of the Indian Constitution mentions that it shall be the duty of every citizen of India to have compassion for living creatures?

Ans 1. 51 A (h)

2. 51 A (g)

3. 51 A (j)

4. 51 A (i)

Question ID : 264330183149

Option 1 ID : 264330718329

Option 2 ID : 264330718328

Option 3 ID : 264330718331

Option 4 ID : 264330718330

Status : Answered

Chosen Option : 2

Q.28 Which of the following was one of the five states formed by breaking up the Bahmani kingdom?

- Ans 1. Karur
 2. Golkonda
 3. Hyderabad
 4. Madras

Question ID : 264330182879
Option 1 ID : 264330717263
Option 2 ID : 264330717260
Option 3 ID : 264330717261
Option 4 ID : 264330717262
Status : Answered
Chosen Option : 2

Q.29 Which of the following topped the medals tally, winning 61 gold medals in the National Games-2022?

- Ans 1. Services Sports Control Board
 2. Kerala
 3. Haryana
 4. Maharashtra

Question ID : 264330113732
Option 1 ID : 264330447013
Option 2 ID : 264330447016
Option 3 ID : 264330447014
Option 4 ID : 264330447015
Status : Answered
Chosen Option : 3

Q.30 What is the standard distance for males in a hurdle event?

- Ans 1. 110 m and 410 m
 2. 100 m and 400 m
 3. 120 m and 410 m
 4. 110 m and 400 m

Question ID : 264330110396
Option 1 ID : 264330433863
Option 2 ID : 264330433861
Option 3 ID : 264330433864
Option 4 ID : 264330433862
Status : Answered
Chosen Option : 2

Q.31 Which of the following is a book written by Jyotirao Phule in 1873?

- Ans 1. Tribe Caste and Society
 2. Last Among Equals
 3. Gulamgiri
 4. Jati ka Vinash

Question ID : 264330119025
Option 1 ID : 264330466756
Option 2 ID : 264330466758
Option 3 ID : 264330466755
Option 4 ID : 264330466757
Status : Answered
Chosen Option : 3

Q.32 Becquerel, which is equal to one disintegration per second (dps) is represented by which symbol?

- Ans 1. Bq
 2. BI
 3. Br
 4. Bc

Question ID : 264330141661
Option 1 ID : 264330554963
Option 2 ID : 264330554965
Option 3 ID : 264330554966
Option 4 ID : 264330554964
Status : Answered
Chosen Option : 1

Q.33 To which genus does the nematode parasite called hookworm belong, which usually spreads through infected soil?

- Ans 1. Fasciola
 2. Ancylostoma
 3. Hirudinaria
 4. Pheretima

Question ID : 264330141703
Option 1 ID : 264330555132
Option 2 ID : 264330555131
Option 3 ID : 264330555134
Option 4 ID : 264330555133
Status : Not Answered
Chosen Option : --

Q.34 Under which of the following Acts can supreme court initiate International Commercial Arbitration?

- Ans 1. International Arbitration Act, 2012
 2. Arbitration and Cancellations Act, 2004
 3. Arbitration and Conciliation Act, 1996
 4. United Nations Act on justice, 2015

Question ID : 264330120175
Option 1 ID : 264330470957
Option 2 ID : 264330470956
Option 3 ID : 264330470955
Option 4 ID : 264330470958
Status : Answered
Chosen Option : 3

Q.35 Tax rates on higher income groups have been increased resulting in _____.

- Ans 1. economic stability
 2. reducing inequalities of income and wealth
 3. economic growth
 4. reducing regional disparities

Question ID : 264330116491
Option 1 ID : 264330458050
Option 2 ID : 264330458049
Option 3 ID : 264330458051
Option 4 ID : 264330458052
Status : Answered
Chosen Option : 3

Q.36 According to Census of India 2011, which of the following states has a population of more than 10 crores?

- Ans 1. Maharashtra
 2. Rajasthan
 3. West Bengal
 4. Andhra Pradesh

Question ID : 264330120326
Option 1 ID : 264330471556
Option 2 ID : 264330471558
Option 3 ID : 264330471557
Option 4 ID : 264330471555
Status : Answered
Chosen Option : 1

Q.37 In the year 1904, who formed a secret organisation of revolutionaries named Abhinav Bharat?

- Ans 1. Lala Har Dayal
 2. Subhash Chandra Bose
 3. Ajit Singh
 4. Vinayak Damodar Savarkar

Question ID : 264330114051
Option 1 ID : 264330448290
Option 2 ID : 264330448289
Option 3 ID : 264330448292
Option 4 ID : 264330448291
Status : Answered
Chosen Option : 4

Q.38 Since which year has the Census become a regular ten yearly exercise in India?

- Ans 1. 1951
 2. 1881
 3. 1961
 4. 1851

Question ID : 264330119006
Option 1 ID : 264330466679
Option 2 ID : 264330466681
Option 3 ID : 264330466682
Option 4 ID : 264330466680
Status : Answered
Chosen Option : 2

Q.39 'The Adventures of Huckleberry Finn' was written by which of the following authors?

- Ans 1. Mark Twain
 2. Robert Louis Stevenson
 3. Jane Austen
 4. Jerome K Jerome

Question ID : 26433055371
Option 1 ID : 264330216471
Option 2 ID : 264330216468
Option 3 ID : 264330216469
Option 4 ID : 264330216470
Status : Answered
Chosen Option : 3

Q.40 Simuka was the founder of which of the following dynasties of the post Mauryan era?

- Ans
- 1. Kushana
 - 2. Parthians
 - 3. Kanva
 - 4. Satavahana

Question ID : 264330182700
Option 1 ID : 264330716572
Option 2 ID : 264330716571
Option 3 ID : 264330716573
Option 4 ID : 264330716574
Status : Answered
Chosen Option : 3

Q.41 Green Revolution is an example of:

- Ans
- 1. how the service sector can bring about a revolution in India
 - 2. how international trade ban can bring changes in the agriculture produce
 - 3. how green GDP can be increased with the agricultural revolution
 - 4. how technology can bring revolutionary changes in agricultural output

Question ID : 264330174151
Option 1 ID : 264330683043
Option 2 ID : 264330683046
Option 3 ID : 264330683044
Option 4 ID : 264330683045
Status : Answered
Chosen Option : 4

Q.42 The Red Fort was commissioned by which of these emperors?

- Ans
- 1. Qutb-ud-din Bakhtiyar Khilji
 - 2. Shah Jahan
 - 3. Jahangir
 - 4. Mohammad Bin Tughlaq

Question ID : 264330109319
Option 1 ID : 264330429556
Option 2 ID : 264330429555
Option 3 ID : 264330429553
Option 4 ID : 264330429554
Status : Answered
Chosen Option : 2

Q.43 Which of the following is involved in the movement of lava over or towards the surface of the earth?

- Ans
- 1. Weathering
 - 2. Exogenic process
 - 3. Diastrophism
 - 4. Volcanism

Question ID : 264330116381
Option 1 ID : 264330457612
Option 2 ID : 264330457611
Option 3 ID : 264330457609
Option 4 ID : 264330457610
Status : Answered
Chosen Option : 4

Q.44 Which of the following schemes aims to provide generic medicines at reasonable prices to the citizen of the country?

- Ans 1. Pradhan Mantri Bharatiya Janaushadhi Pariyojana
 2. Mission Indradhanush
 3. Janani Shishu Suraksha Karyakaram
 4. Universal Immunisation Programme

Question ID : 264330109414
Option 1 ID : 264330429935
Option 2 ID : 264330429936
Option 3 ID : 264330429933
Option 4 ID : 264330429934
Status : Answered
Chosen Option : 1

Q.45 Devadasi National Award is given at the dance festival held at the pilgrim centre in the state of _____.

- Ans 1. Kerala
 2. West Bengal
 3. Tamil Nadu
 4. Odisha

Question ID : 26433071529
Option 1 ID : 264330280541
Option 2 ID : 264330280543
Option 3 ID : 264330280542
Option 4 ID : 264330280540
Status : Answered
Chosen Option : 3

Q.46 Who among the following emphasised and propagated that "the Vedanta is the religion of all and not of the Hindus alone"?

- Ans 1. Raja Ram Mohan Roy
 2. Ishwar Chandra Vidyasagar
 3. Swami Vivekanand
 4. Swami Dayanand Saraswati

Question ID : 264330130573
Option 1 ID : 264330511404
Option 2 ID : 264330511403
Option 3 ID : 264330511406
Option 4 ID : 264330511405
Status : Answered
Chosen Option : 3

Q.47 What is the spread of living pteridophytes to narrow geographical regions?

- Ans 1. Limited and restricted
 2. Limited and unrestricted
 3. Unlimited and restricted
 4. Unlimited and unrestricted

Question ID : 264330113314
Option 1 ID : 264330445343
Option 2 ID : 264330445342
Option 3 ID : 264330445341
Option 4 ID : 264330445344
Status : Answered
Chosen Option : 1

Q.48 The Rigveda Samhita comprises of _____ books.

- Ans
- 1. 13
 - 2. 11
 - 3. 7
 - 4. 10

Question ID : 264330171659
Option 1 ID : 264330673242
Option 2 ID : 264330673241
Option 3 ID : 264330673239
Option 4 ID : 264330673240
Status : Answered
Chosen Option : 4

Q.49 Which of the following states had the least decadal growth in literacy rate, as per census 2011?

- Ans
- 1. Mizoram
 - 2. Tripura
 - 3. Kerala
 - 4. Goa

Question ID : 26433092884
Option 1 ID : 264330364819
Option 2 ID : 264330364817
Option 3 ID : 264330364818
Option 4 ID : 264330364820
Status : Answered
Chosen Option : 1

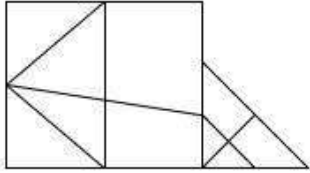
Q.50 Who advises the Governor with respect to proroguing of the session of the State Legislature?

- Ans
- 1. Speaker
 - 2. Chief Minister
 - 3. Deputy Speaker
 - 4. Senior Member of the House

Question ID : 264330173538
Option 1 ID : 264330680632
Option 2 ID : 264330680631
Option 3 ID : 264330680633
Option 4 ID : 264330680634
Status : Answered
Chosen Option : 1

Section : Reasoning

Q.1 How many triangles are there in the given figure?



- Ans
- 1. 6
 - 2. 11
 - 3. 12
 - 4. 8

Question ID : 26433085411
Option 1 ID : 264330335345
Option 2 ID : 264330335347
Option 3 ID : 264330335348
Option 4 ID : 264330335346
Status : Answered
Chosen Option : 2

Q.2 Select the correct mirror image of the given figure when the mirror is placed at MN as shown below.

B 7 t y u 9 K

M ————— N

- Ans
- 1. **B Δ f λ n ə K**
 - 2. **B Z f λ n ə K**
 - 3. **B Δ t λ n 6 K**
 - 4. **B Δ f λ n ə K**

Question ID : 26433080790
Option 1 ID : 264330317093
Option 2 ID : 264330317094
Option 3 ID : 264330317096
Option 4 ID : 264330317095
Status : Answered
Chosen Option : 4

Q.3 Which two signs should be interchanged to make the following equation correct?

$$32 \times 5 + 12 \div 4 - 18 = 29$$

- Ans
- 1. \div and \times
 - 2. $-$ and \times
 - 3. $-$ and $+$
 - 4. $+$ and \times

Question ID : 264330101078

Option 1 ID : 264330396860

Option 2 ID : 264330396859

Option 3 ID : 264330396858

Option 4 ID : 264330396857

Status : Answered

Chosen Option : 4

Q.4 1, 2, 3, 4, 5 and 6 are written on different faces of a dice. Three different positions of the same dice are shown below. Find the number on the face opposite to the one showing '1'.

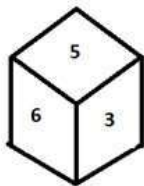


figure 1

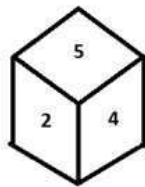


figure 2

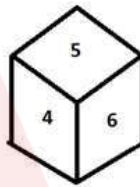


figure 3

- Ans
- 1. 4
 - 2. 2
 - 3. 6
 - 4. 5

Question ID : 264330110553

Option 1 ID : 264330434491

Option 2 ID : 264330434490

Option 3 ID : 264330434489

Option 4 ID : 264330434492

Status : Answered

Chosen Option : 4

Q.5 Select the correct mirror image of the given combination when the mirror is placed at 'XY' as shown below

B R I L L I E N T

X
|
Y

- Ans
- 1. T N E I L L I R B
 - 2. B B I L L I E N T
 - 3. T N E I L L I R B
 - 4. T N E I L L I R B

Question ID : 264330129692

Option 1 ID : 264330508136

Option 2 ID : 264330508135

Option 3 ID : 264330508134

Option 4 ID : 264330508137

Status : Answered

Chosen Option : 3

Q.6 Two statements are given followed by two conclusions numbered I and II. Assuming the statements to be true, even if they seem to be at variance from commonly known facts, decide which of the conclusions logically follow(s) from the statements.

Statements:

All Tears are Salts.

Some Tears are Crocodiles.

Conclusions:

I. All Crocodiles are Tears.

II. All Crocodiles are Salts.

- Ans
- 1. Neither conclusion I nor II follows.
 - 2. Only conclusion I follows.
 - 3. Both conclusions I and II follow.
 - 4. Only conclusion II follows.

Question ID : 26433076602

Option 1 ID : 264330300475

Option 2 ID : 264330300472

Option 3 ID : 264330300474

Option 4 ID : 264330300473

Status : Answered

Chosen Option : 1

Q.7 Select the set in which the numbers are related in the same way as are the numbers of the following sets.

(NOTE: Operations should be performed on the whole numbers, without breaking down the numbers into its constituent digits. E.g. 13 – Operations on 13 such as adding/deleting/multiplying etc. to 13 can be performed. Breaking down 13 into 1 and 3 and then performing mathematical operations on 1 and 3 is not allowed)
(2, 14, 3), (4, 28, 5)

Ans 1. (7, 37, 2)

2. (7, 45, 2)

3. (7, 22, 2)

4. (7, 39, 2)

Question ID : 26433097190

Option 1 ID : 264330381460

Option 2 ID : 264330381457

Option 3 ID : 264330381459

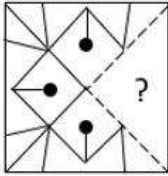
Option 4 ID : 264330381458

Status : Answered

Chosen Option : 3

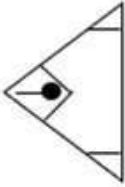


Q.8 Select the option figure that will replace the question mark (?) in the figure given below to complete the pattern.

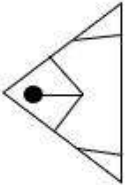


Ans

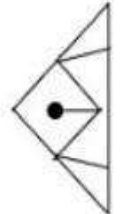
✗ 1.



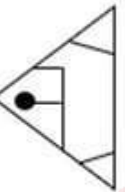
✗ 2.



✓ 3.



✗ 4.

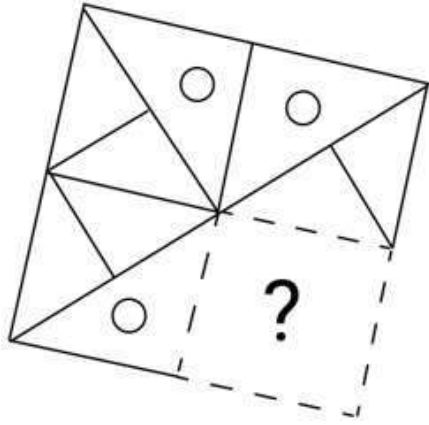


Question ID : 26433080839
Option 1 ID : 264330317292
Option 2 ID : 264330317289
Option 3 ID : 264330317291
Option 4 ID : 264330317290

Status : Answered

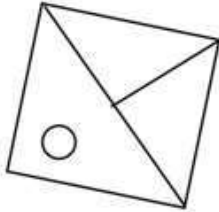
Chosen Option : 3

Q.9 Select the figure from the options that can replace the question mark (?) and complete the given pattern.

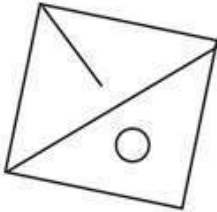


Ans

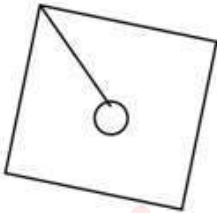
✓ 1.



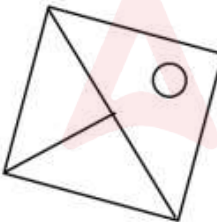
✗ 2.



✗ 3.



✗ 4.



Question ID : 264330106478

Option 1 ID : 264330418215

Option 2 ID : 264330418214

Option 3 ID : 264330418213

Option 4 ID : 264330418216

Status : Answered

Chosen Option : 1

Q.10 Which two signs should be interchanged to make the following equation correct?

$$39 + 4 \div 5 - 57 \times 3 = 40$$

Ans 1. + and ×

2. + and +

3. - and +

4. - and ×

Question ID : 264330101085

Option 1 ID : 264330396885

Option 2 ID : 264330396888

Option 3 ID : 264330396886

Option 4 ID : 264330396887

Status : Answered

Chosen Option : 1

Q.11 Select the option that is related to the third term in the same way as the second term is related to the first term and the sixth term is related to the fifth term.

$$13 : 169 :: 9 : ? :: 21 : 441$$

Ans 1. 27

2. 729

3. 81

4. 243

Question ID : 264330101039

Option 1 ID : 264330396703

Option 2 ID : 264330396702

Option 3 ID : 264330396704

Option 4 ID : 264330396701

Status : Answered

Chosen Option : 3

Adda247

Q.12 Which figure from the given options would replace the question mark (?) if the following figure series were to be continued?

S O R A	Z A R E	S R O Z	Z S E R	O R E A	Z R S O	?
------------------	------------------	------------------	------------------	------------------	------------------	---

Ans

✗ 1.

O	E
A	
Z	
S	R

✗ 2.

O	A
S	
E	
Z	R

✗ 3.

A	R
S	
E	
O	Z

✓ 4.

O	S
Z	
A	
E	R

Question ID : 26433044935
 Option 1 ID : 264330176178
 Option 2 ID : 264330176175
 Option 3 ID : 264330176176
 Option 4 ID : 264330176177
 Status : Answered
 Chosen Option : 4

Q.13 Which figure should replace the question mark (?) if the series were to be continued?

3	X	Y	6	3	O	8	X	D	Y	8	6	
	8			Y			O			D		?
6	D	O	D	X	8	Y	3	6	3	X	O	

Ans

✓ 1.

O	X	3
	8	
D	8	Y

✗ 2.

O	X	3
	8	
6	D	Y

✗ 3.

3	X	Y
	8	
O	D	6

✗ 4.

O	X	3
	Y	
6	8	D

Question ID : 264330130809

Option 1 ID : 264330512350

Option 2 ID : 264330512349

Option 3 ID : 264330512348

Option 4 ID : 264330512347

Status : Answered

Chosen Option : 1

Q.14 P, Q, R, S and T are five friends sitting in a straight line facing North. P sits at the extreme right end. T sits to the immediate left of S but is not at the extreme left end. R is the immediate neighbour of P. Who sits at the extreme left end of the row?

Ans ✗ 1. P

✗ 2. S

✓ 3. Q

✗ 4. R

Question ID : 26433090115

Option 1 ID : 264330353937

Option 2 ID : 264330353940

Option 3 ID : 264330353939

Option 4 ID : 264330353938

Status : Answered

Chosen Option : 3

Q.15 In a certain code language, 'BEAM' is written as 'BAFL' and 'HUGE' is written as 'FFIT'.
How will 'ZERO' be written in that language?

- Ans
- 1. FSNY
 - 2. DSNA
 - 3. DNSA
 - 4. FNSY

Question ID : 26433087177
Option 1 ID : 264330342346
Option 2 ID : 264330342347
Option 3 ID : 264330342348
Option 4 ID : 264330342345
Status : Answered
Chosen Option : 4

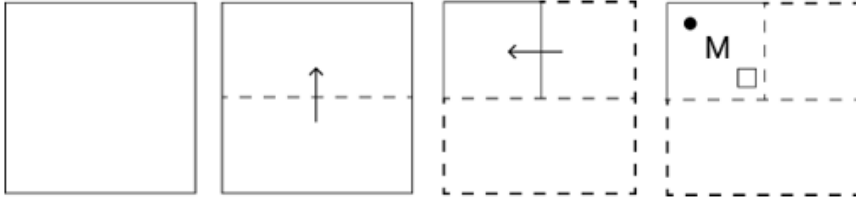
Q.16 Select the number from among the given options that can replace the question mark (?) in the following series.
8.8, ?, 7.3, 6.7, 6.2, 5.8

- Ans
- 1. 8.1
 - 2. 8
 - 3. 7.9
 - 4. 8.2

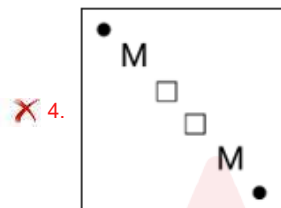
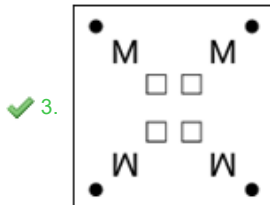
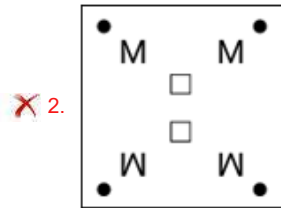
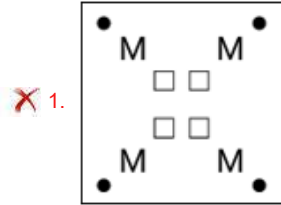
Question ID : 26433011628
Option 1 ID : 264330438598
Option 2 ID : 264330438599
Option 3 ID : 264330438600
Option 4 ID : 264330438597
Status : Answered
Chosen Option : 2

Adda247

Q.17 A square sheet of paper is folded along the dotted line successively along the directions shown and is then punched in the last. How would the paper look when unfolded?



Ans



Question ID : 264330172419

Option 1 ID : 264330676227

Option 2 ID : 264330676229

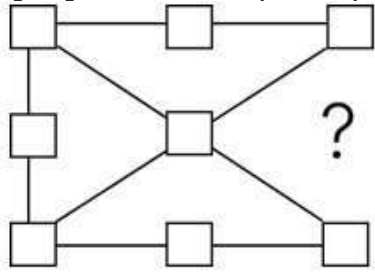
Option 3 ID : 264330676228

Option 4 ID : 264330676230

Status : Answered

Chosen Option : 3

Q.18 Select the figure from the given options that will replace the question mark (?) in the figure given below to complete the pattern so that the final image is symmetrical.



Ans

1.



2.



3.



4.



Question ID : 264330114736

Option 1 ID : 264330451032

Option 2 ID : 264330451029

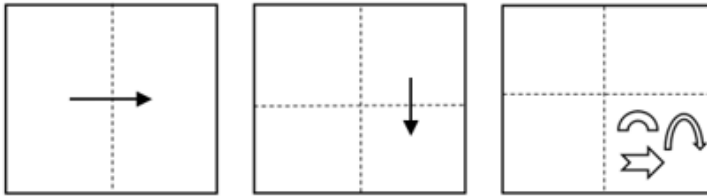
Option 3 ID : 264330451030

Option 4 ID : 264330451031

Status : Answered

Chosen Option : 3

Q.19 A paper is folded and cut as shown below. How will it appear when unfolded?



Ans

- ✗ 1.
- ✗ 2.
- ✗ 3.
- ✓ 4.

Question ID : 264330113649

Option 1 ID : 264330446683

Option 2 ID : 264330446682

Option 3 ID : 264330446681

Option 4 ID : 264330446684

Status : Answered

Chosen Option : 3

Q.20 Select the option that represents the letters that, when sequentially placed from left to right in the blanks below, will complete the letter series.

A _ _ PS _ LNP _ A _ N _ S _ LNP _

- ✓ 1. LNASLPAS
- ✗ 2. LNASLPSA
- ✗ 3. NLASLPAS
- ✗ 4. LNASPLAS

Question ID : 26433090011

Option 1 ID : 264330353521

Option 2 ID : 264330353524

Option 3 ID : 264330353522

Option 4 ID : 264330353523

Status : Answered

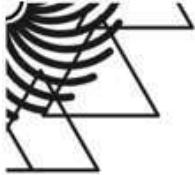
Chosen Option : 1

Q.21 Which of the following option figures will complete the pattern in the figure given below?



Ans

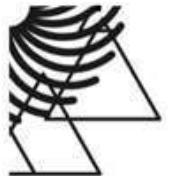
✗ 1.



✗ 2.



✗ 3.



✓ 4.



Question ID : 26433080629
Option 1 ID : 264330316450
Option 2 ID : 264330316449
Option 3 ID : 264330316452
Option 4 ID : 264330316451
Status : Answered
Chosen Option : 4

Q.22 Which figure should replace the question mark (?) if the following series were to be continued?

X		□		P		S		X		?				
C	S	P	P	C	S	□	L	X	X	□	L	S	Z	P
		□			X			S		P			L	

Ans

✗ 1.

X		
P	S	Z
		L

✓ 2.

L		
P	S	Z
		X

✗ 3.

S		
X	△	L
		P

✗ 4.

L		
Z	P	S
		△

Question ID : 264330103849

Option 1 ID : 264330407700

Option 2 ID : 264330407698

Option 3 ID : 264330407699

Option 4 ID : 264330407697

Status : Answered

Chosen Option : 2

Q.23 Select the correct mirror image of the given figure when the mirror is placed at PQ as shown below.

4 E c U Q V m | P
Q

Ans

- ✓ 1. m V Q U c E 4
- ✗ 2. m V Q U c E 4
- ✗ 3. m V Q U c E 4
- ✗ 4. m V Q U c E 4

Question ID : 26433080786
 Option 1 ID : 264330317077
 Option 2 ID : 264330317080
 Option 3 ID : 264330317078
 Option 4 ID : 264330317079
 Status : Answered
 Chosen Option : 1

Q.24 Select the correct mirror image of the given combination when the mirror is placed at 'PQ' as shown below.

G N V Y T 5 | P
Q

Ans

- ✓ 1. 2 T Y V N G
- ✗ 2. 2 T Y V N G
- ✗ 3. 2 T Y V N G
- ✗ 4. 2 T Y V N G

Question ID : 264330129817
 Option 1 ID : 264330508500
 Option 2 ID : 264330508501
 Option 3 ID : 264330508499
 Option 4 ID : 264330508502
 Status : Answered
 Chosen Option : 1

Q.25 Select the option that is related to the fifth letter-cluster in the same way as the second letter-cluster is related to the first letter-cluster and the fourth letter-cluster is related to the third letter-cluster.

HUGE : IJWI :: BEAM : QDGC :: RIDE : ?

- Ans
- 1. IGLS
 - 2. IGKS
 - 3. IHKR
 - 4. IGKR

Question ID : 26433076454
Option 1 ID : 264330299883
Option 2 ID : 264330299882
Option 3 ID : 264330299881
Option 4 ID : 264330299880
Status : Answered
Chosen Option : 2

Section : Numerical Ability

Q.1 A mobile phone is available for ₹39,300 cash payment, or for ₹7,450 cash down payment and three equal yearly instalments. If the shopkeeper charges interest at the rate of 20% per annum, compounded annually, what is the amount of instalment (in ₹)?

- Ans
- 1. 16240
 - 2. 15000
 - 3. 14060
 - 4. 15120

Question ID : 264330103986
Option 1 ID : 264330408248
Option 2 ID : 264330408246
Option 3 ID : 264330408245
Option 4 ID : 264330408247
Status : Answered
Chosen Option : 4

Q.2 On selling an item for ₹1,500, a shopkeeper loses 20%. For what amount should he sell it to gain 10%?

- Ans
- 1. ₹2,162.50
 - 2. ₹2,000
 - 3. ₹2,100
 - 4. ₹2,062.50

Question ID : 264330109248
Option 1 ID : 264330429272
Option 2 ID : 264330429270
Option 3 ID : 264330429271
Option 4 ID : 264330429269
Status : Answered
Chosen Option : 4

Q.3 If p and q are two prime numbers, then the average of p and q is:

- Ans
- 1. $p - q$
 - 2. $(p + q)/2$
 - 3. $p + q$
 - 4. $(p - q)/2$

Question ID : 264330119395

Option 1 ID : 264330467869

Option 2 ID : 264330467867

Option 3 ID : 264330467868

Option 4 ID : 264330467870

Status : Answered

Chosen Option : 2

Q.4 A sphere is 10 cm in diameter. Find the volume of the sphere in cubic metres?

- Ans
- 1. $\frac{\pi}{6} \times 10^{-2}$
 - 2. $\frac{\pi}{8} \times 10^{-2}$
 - 3. $\frac{\pi}{6} \times 10^{-3}$
 - 4. $\frac{\pi}{8} \times 10^{-3}$

Question ID : 264330118206

Option 1 ID : 264330464639

Option 2 ID : 264330464641

Option 3 ID : 264330464640

Option 4 ID : 264330464642

Status : Answered

Chosen Option : 3

Q.5 A dealer fixed the price of an article 24% above the cost of production. While selling it, he allows a discount of 15% on the fixed price and makes a profit of ₹27. Find the cost of production of the article.

- Ans
- 1. ₹400
 - 2. ₹700
 - 3. ₹500
 - 4. ₹600

Question ID : 264330119928

Option 1 ID : 264330469987

Option 2 ID : 264330469990

Option 3 ID : 264330469988

Option 4 ID : 264330469989

Status : Answered

Chosen Option : 3

Q.6 Find the volume (in cm^3) of the hemisphere whose diameter measures 14 cm

(Use $\pi = \frac{22}{7}$).

- Ans
- 1. $\frac{2,615}{3}$
 - 2. $\frac{2,651}{3}$
 - 3. $\frac{2,156}{3}$
 - 4. $\frac{2,516}{3}$

Question ID : 264330109354

Option 1 ID : 264330429695

Option 2 ID : 264330429696

Option 3 ID : 264330429693

Option 4 ID : 264330429694

Status : Answered

Chosen Option : 3

Q.7 The ratio of two numbers is 5:7 and their difference is 48. The smaller of the two numbers is:

- Ans
- 1. 80
 - 2. 100
 - 3. 140
 - 4. 120

Question ID : 264330111467

Option 1 ID : 264330437953

Option 2 ID : 264330437954

Option 3 ID : 264330437956

Option 4 ID : 264330437955

Status : Answered

Chosen Option : 4

Q.8 A can do a work in 30 days and B can do the same work in 40 days. They work together for 8 days and then B leaves the work. In how many days will A finish the remaining work?

- Ans
- 1. 14
 - 2. 17
 - 3. 16
 - 4. 15

Question ID : 264330103995

Option 1 ID : 264330408281

Option 2 ID : 264330408282

Option 3 ID : 264330408284

Option 4 ID : 264330408283

Status : Answered

Chosen Option : 3

Q.9 In how many ways can 480 be written as the product of two numbers which are coprime to each other?

- Ans
- 1. 2
 - 2. 3
 - 3. 1
 - 4. 4

Question ID : 264330109329
Option 1 ID : 264330429594
Option 2 ID : 264330429595
Option 3 ID : 264330429593
Option 4 ID : 264330429596
Status : Answered
Chosen Option : 1

Q.10 In an election between two candidates, 80% of the voters cast their votes, out of which 5% of the votes were declared invalid. A candidate got 5,700 votes, which were 75% of the total valid votes. Find the total number of voters enrolled in that election.

- Ans
- 1. 9000
 - 2. 10000
 - 3. 9500
 - 4. 12000

Question ID : 264330104423
Option 1 ID : 264330409996
Option 2 ID : 264330409994
Option 3 ID : 264330409995
Option 4 ID : 264330409993
Status : Answered
Chosen Option : 2

Q.11 A 220 m long train, travelling at a speed of 99 km/h, completely crosses another train coming from the opposite direction at a speed of 81 km/h in 9 seconds. Find the length of the second train (in metres).

- Ans
- 1. 230
 - 2. 220
 - 3. 240
 - 4. 225

Question ID : 264330122847
Option 1 ID : 264330481457
Option 2 ID : 264330481456
Option 3 ID : 264330481458
Option 4 ID : 264330481455
Status : Answered
Chosen Option : 1

Q.12 Rajneesh decided to invest in gold every month. He buys gold worth ₹65,000. He gets a rebate of 8% on it. After getting the rebate, he pays tax at the rate of 10%. Next month, he buys ₹70,000 with a rebate of 10% and tax 12%. What is the percentage change in his investment from the first month to the second month?

- Ans
- 1. Decrease; between 7 and 8 %
 - 2. Decrease; between 5 and 6 %
 - 3. Increase; between 7 and 8%
 - 4. Increase; between 5 and 6%

Question ID : 264330103697
Option 1 ID : 264330407096
Option 2 ID : 264330407094
Option 3 ID : 264330407093
Option 4 ID : 264330407095
Status : Answered
Chosen Option : 3

Q.13 At what rate per cent per annum will a sum of money double itself on simple interest in 7 years?

- Ans
- 1. $7\frac{1}{14}\%$
 - 2. $14\frac{4}{7}\%$
 - 3. $14\frac{2}{7}\%$
 - 4. $14\frac{1}{7}\%$

Question ID : 264330119952
Option 1 ID : 264330470083
Option 2 ID : 264330470085
Option 3 ID : 264330470086
Option 4 ID : 264330470084
Status : Answered
Chosen Option : 3

Q.14 Three numbers are in the ratio 4: 5: 6 and their LCM is 180. Their HCF is:

- Ans
- 1. 3
 - 2. 4
 - 3. 5
 - 4. 2

Question ID : 264330104150
Option 1 ID : 264330408902
Option 2 ID : 264330408903
Option 3 ID : 264330408904
Option 4 ID : 264330408901
Status : Answered
Chosen Option : 1

Q.15 The HCF of 204, 507 and 174 is:

- Ans
- 1. 17
 - 2. 2
 - 3. 13
 - 4. 3

Question ID : 264330106056
Option 1 ID : 264330416528
Option 2 ID : 264330416525
Option 3 ID : 264330416527
Option 4 ID : 264330416526
Status : Answered
Chosen Option : 4

Section : Computer Proficiency

Q.1 What is the primary purpose of an email client?

- Ans
- 1. To create spreadsheets
 - 2. To edit photos
 - 3. To read and send emails
 - 4. To play video games

Question ID : 264330180661
Option 1 ID : 264330708614
Option 2 ID : 264330708613
Option 3 ID : 264330708612
Option 4 ID : 264330708611
Status : Answered
Chosen Option : 3

Q.2 What is the purpose of the 'Print Preview' feature in Microsoft Word 365 ?

- Ans
- 1. It allows you to insert images and graphics.
 - 2. It allows you to edit text and formatting.
 - 3. It provides suggestions for improving grammar and spelling.
 - 4. It provides a preview of how the document will look when printed.

Question ID : 264330180723
Option 1 ID : 264330708861
Option 2 ID : 264330708859
Option 3 ID : 264330708862
Option 4 ID : 264330708860
Status : Answered
Chosen Option : 4

Q.3 In spreadsheet software, which formula can be used to find the largest value in a range of cells?

- Ans
- 1. SUM()
 - 2. MIN()
 - 3. MAX()
 - 4. COUNT()

Question ID : 264330173319
Option 1 ID : 264330679757
Option 2 ID : 264330679756
Option 3 ID : 264330679755
Option 4 ID : 264330679758
Status : Answered
Chosen Option : 3

Q.4 In MS Word 365, which group within the Home tab contains the alignment options?

- Ans
- 1. Font
 - 2. Paragraph
 - 3. Styles
 - 4. Editing

Question ID : 264330180639
Option 1 ID : 264330708523
Option 2 ID : 264330708525
Option 3 ID : 264330708524
Option 4 ID : 264330708526
Status : Answered
Chosen Option : 2

Q.5 The 'Sort & Filter' group is available under which of the following tabs in MS Excel 365?

- Ans
- 1. Data
 - 2. View
 - 3. Home
 - 4. Insert

Question ID : 264330181070
Option 1 ID : 264330710225
Option 2 ID : 264330710226
Option 3 ID : 264330710223
Option 4 ID : 264330710224
Status : Answered
Chosen Option : 1

Q.6 Which of the following is a function in MS Excel 365 that returns the sum of the values in a range of cells?

- Ans
- 1. COUNT
 - 2. AVERAGE
 - 3. SUM
 - 4. MAX

Question ID : 264330178562
Option 1 ID : 264330700276
Option 2 ID : 264330700277
Option 3 ID : 264330700275
Option 4 ID : 264330700278
Status : Answered
Chosen Option : 3

Q.7 In MS word 365 What do you mean by hamburger menu?

- Ans
- 1. It prints the document in the file.
 - 2. It deletes the document in the file.
 - 3. It hides the traditional file menu.
 - 4. It saves the document in the file.

Question ID : 264330171420
Option 1 ID : 264330672298
Option 2 ID : 264330672296
Option 3 ID : 264330672297
Option 4 ID : 264330672295
Status : Answered
Chosen Option : 3

Q.8 Which of the following is the purpose of the 'Cell Padding' property in a table in MS Word?

- Ans
- 1. It adds a border around each cell
 - 2. It merges adjacent cells
 - 3. It adjusts the spacing between cells and their content
 - 4. It changes the font size within the cells

Question ID : 264330180836
Option 1 ID : 264330709308
Option 2 ID : 264330709310
Option 3 ID : 264330709307
Option 4 ID : 264330709309
Status : Answered
Chosen Option : 1

Q.9 Which of the following does the 'Bold' formatting option typically do to text in an MS Word 365, document?

- Ans
- 1. Make the text darker and thicker
 - 2. Make the text larger
 - 3. Change the font style to italics
 - 4. Change the text colour

Question ID : 264330180842
Option 1 ID : 264330709333
Option 2 ID : 264330709332
Option 3 ID : 264330709331
Option 4 ID : 264330709334
Status : Answered
Chosen Option : 1

Q.10 Which of the following internet services is a secure connection over the internet that allows users to connect to a private network from a remote location?

- Ans**
- 1. VoIP
 - 2. Email
 - 3. VPN
 - 4. Web browsing

Question ID : **264330180599**

Option 1 ID : **264330708366**

Option 2 ID : **264330708363**

Option 3 ID : **264330708365**

Option 4 ID : **264330708364**

Status : **Answered**

Chosen Option : **3**



Constable Executive Male and Female in Delhi Police Examination 2023

Roll Number	
Candidate Name	
Venue Name	City Law College
Exam Date	22/11/2023
Exam Time	3:00 PM - 4:30 PM
Subject	Constable Executive Male and Female in Delhi Police Examination 2023

Section : **General Knowledge**

Q.1 The National Rice Research Institute is located at _____ in Odisha.

- Ans** 1. Cuttack
 2. Puri
 3. Sambalpur
 4. Koraput

Question ID : **264330181277**
Option 1 ID : **264330711033**
Option 2 ID : **264330711034**
Option 3 ID : **264330711032**
Option 4 ID : **264330711031**
Status : **Not Answered**
Chosen Option : --

Q.2 In how many phases was the 2011 Census conducted in India?

- Ans** 1. One
 2. Four
 3. Two
 4. Three

Question ID : **264330130587**
Option 1 ID : **264330511461**
Option 2 ID : **264330511462**
Option 3 ID : **264330511459**
Option 4 ID : **264330511460**
Status : **Not Answered**
Chosen Option : --

Q.3 _____ means avoiding imports of goods which could be produced in India.

- Ans** 1. Economic growth
 2. Modernisation
 3. Self-reliance
 4. Equity

Question ID : **264330110174**
Option 1 ID : **264330432975**
Option 2 ID : **264330432974**
Option 3 ID : **264330432976**
Option 4 ID : **264330432973**
Status : **Answered**
Chosen Option : **3**

Q.4 In plants, which hormone helps the cells to grow longer?

- Ans
- 1. Cytokinin
 - 2. Jasmonate
 - 3. Ethylene
 - 4. Auxin

Question ID : 264330134882
Option 1 ID : 264330528463
Option 2 ID : 264330528464
Option 3 ID : 264330528465
Option 4 ID : 264330528466
Status : Answered
Chosen Option : 3

Q.5 What are the compounds in food that induce the growth or activity of beneficial gut microorganisms called?

- Ans
- 1. Abiotic
 - 2. Postbiotics
 - 3. Prebiotics
 - 4. Antibiotics

Question ID : 264330120924
Option 1 ID : 264330473911
Option 2 ID : 264330473913
Option 3 ID : 264330473912
Option 4 ID : 264330473914
Status : Answered
Chosen Option : 3

Q.6 Which of the following social reform organisations was established in Madras in 1864?

- Ans
- 1. The Veda Samaj
 - 2. The Arya Samaj
 - 3. The Brahmo Samaj
 - 4. The Prarthana Samaj

Question ID : 264330114117
Option 1 ID : 264330448554
Option 2 ID : 264330448556
Option 3 ID : 264330448553
Option 4 ID : 264330448555
Status : Not Answered
Chosen Option : --

Q.7 मुद्रा की छपाई के माध्यम से केंद्रीय बैंक द्वारा जुटाए गए राजस्व को _____ कहा जाता है।

- Ans
- 1. राजकोषीय बैलेंस (Fiscal Balance)
 - 2. लाभ (Profit)
 - 3. टंकण प्रलाभ (Seigniorage)
 - 4. खजाना (Treasury)

Question ID : 264330112464
Option 1 ID : 264330441943
Option 2 ID : 264330441944
Option 3 ID : 264330441942
Option 4 ID : 264330441941
Status : Answered
Chosen Option : 3

Q.8 जब कई राजनीतिक पार्टियाँ एक आम सहमति कार्यक्रम के एजेडे के आधार पर सरकार बनाने और राजनीतिक शक्ति का प्रयोग करने के लिए हाथ मिलाती हैं, तो इसे क्या कहा जाता है?

- Ans 1. गठबंधन सरकार
 2. बहुमत दल की सरकार
 3. राष्ट्रपति सरकार
 4. एकदलीय प्रणाली

Question ID : 264330173521
Option 1 ID : 264330680564
Option 2 ID : 264330680565
Option 3 ID : 264330680566
Option 4 ID : 264330680563
Status : Answered
Chosen Option : 1

Q.9 Who among the following Bharatanatyam and Kuchipudi dancers received the Padma Vibhushan award in the year 2016?

- Ans 1. Alarmel Valli
 2. Padma Subrahmanyam
 3. Aparna Satheesan
 4. Yamini Krishnanamurthi

Question ID : 26433071522
Option 1 ID : 264330280514
Option 2 ID : 264330280512
Option 3 ID : 264330280513
Option 4 ID : 264330280515
Status : Answered
Chosen Option : 4

Q.10 Who among the following was the founder and director of Darpana Academy of Performing Arts?

- Ans 1. Mrinalini Sarabhai
 2. Kumari Kamala
 3. Yamini Krishnamurthy
 4. Rukmini Devi Arundel

Question ID : 264330111200
Option 1 ID : 264330436886
Option 2 ID : 264330436887
Option 3 ID : 264330436885
Option 4 ID : 264330436888
Status : Not Answered
Chosen Option : --

Q.11 Who among the following fought the Mughal emperor Babur in 1527 at Khanwa?

- Ans 1. Rana Amar Singh
 2. Rana Pratap
 3. Rana Sanga
 4. Rana Raj Singh

Question ID : 264330183100
Option 1 ID : 264330718133
Option 2 ID : 264330718135
Option 3 ID : 264330718134
Option 4 ID : 264330718132
Status : Answered
Chosen Option : 3

Q.12 Sheema Kermani is associated with which of these dance forms?

Ans 1. Bharatanatyam

2. Kathakali

3. Mohiniyattam

4. Sattriya

Question ID : 264330109298

Option 1 ID : 264330429471

Option 2 ID : 264330429470

Option 3 ID : 264330429469

Option 4 ID : 264330429472

Status : Not Answered

Chosen Option : --

Q.13 In which of the following years did the peasant movement in Bardoli take place?

Ans 1. 1918

2. 1928

3. 1916

4. 1934

Question ID : 264330112410

Option 1 ID : 264330441726

Option 2 ID : 264330441727

Option 3 ID : 264330441725

Option 4 ID : 264330441728

Status : Answered

Chosen Option : 2

Q.14 In which of the following years was the SFURTI scheme launched by the Ministry of Micro Small and Medium Enterprises?

Ans 1. 2005

2. 2003

3. 2009

4. 2007

Question ID : 264330116546

Option 1 ID : 264330458270

Option 2 ID : 264330458269

Option 3 ID : 264330458272

Option 4 ID : 264330458271

Status : Not Answered

Chosen Option : --

Q.15 In an ecosystem, which of the following is/are autotrophs?

Ans 1. Fishes

2. Earthworms

3. Sunlight

4. Plants

Question ID : 264330117610

Option 1 ID : 264330462467

Option 2 ID : 264330462468

Option 3 ID : 264330462466

Option 4 ID : 264330462465

Status : Answered

Chosen Option : 4

Q.16 Which of the following Articles of the Constitution of India deals with the National Commission for Scheduled Castes?

- Ans** 1. Article 338
 2. Article 335
 3. Article 336
 4. Article 337

Question ID : 264330110592
Option 1 ID : 264330434645
Option 2 ID : 264330434648
Option 3 ID : 264330434647
Option 4 ID : 264330434646
Status : Answered
Chosen Option : 1

Q.17 Which of the following international organisations was founded in 1995?

- Ans** 1. International Labour Organization
 2. International Monetary Fund
 3. World Trade Organization
 4. World Bank

Question ID : 26433066623
Option 1 ID : 264330261018
Option 2 ID : 264330261016
Option 3 ID : 264330261019
Option 4 ID : 264330261017
Status : Answered
Chosen Option : 3

Q.18 When is Guru Nanak Jayanti celebrated in India as per the Hindu lunar calendar?

- Ans** 1. Kartika Poornima
 2. Paush Poornima
 3. Paush Amavasya
 4. Kartika Amavasya

Question ID : 264330110463
Option 1 ID : 264330434130
Option 2 ID : 264330434131
Option 3 ID : 264330434132
Option 4 ID : 264330434129
Status : Answered
Chosen Option : 1

Q.19 Who among the following is NOT a shehnai player?

- Ans** 1. N Ramani
 2. Krishna Ram Chaudhary
 3. Ali Ahmad Hussain
 4. Bismillah Khan

Question ID : 264330111940
Option 1 ID : 264330439845
Option 2 ID : 264330439847
Option 3 ID : 264330439848
Option 4 ID : 264330439846
Status : Answered
Chosen Option : 2

Q.20 महादेश रचना संबंधी (epeirogenic) प्रक्रिया क्या है?

- Ans
- 1. इसमें भूपर्पटी पट्टिका का क्षैतिज संचलन शामिल है।
 - 2. इसमें जल का अपेक्षाकृत अल्प संचलन शामिल है।
 - 3. इसमें चट्टानों का अपेक्षाकृत अल्प संचलन शामिल है।
 - 4. इसमें भू-पर्पटी के बड़े हिस्से का उत्थान या आवलन शामिल है।

Question ID : 264330118517

Option 1 ID : 264330465472

Option 2 ID : 264330465471

Option 3 ID : 264330465469

Option 4 ID : 264330465470

Status : Not Answered

Chosen Option : --

Q.21 The English novel 'Heart of Darkness' was written by which of the following authors?

- Ans
- 1. Herman Melville
 - 2. Joseph Conrad
 - 3. Charles Dickens
 - 4. Edgar Allen Poe

Question ID : 26433055372

Option 1 ID : 264330216475

Option 2 ID : 264330216472

Option 3 ID : 264330216474

Option 4 ID : 264330216473

Status : Not Answered

Chosen Option : --

Q.22 Which of the following pairs of cities is connected by Sher-Shah Suri Marg?

- Ans
- 1. Mumbai-Bengaluru
 - 2. Delhi-Amritsar
 - 3. Delhi-Jaipur
 - 4. Delhi-Mumbai

Question ID : 264330180512

Option 1 ID : 264330708018

Option 2 ID : 264330708016

Option 3 ID : 264330708015

Option 4 ID : 264330708017

Status : Answered

Chosen Option : 2

Q.23 'Aamar Jiban', is the autobiography written by an Indian woman. Who was she?

- Ans
- 1. Sarojini Naidu
 - 2. Rassundari Devi
 - 3. Sucheta Kriplani
 - 4. Annie Besant

Question ID : 264330112863

Option 1 ID : 264330443539

Option 2 ID : 264330443537

Option 3 ID : 264330443540

Option 4 ID : 264330443538

Status : Not Answered

Chosen Option : --

Q.24 Two compounds with the same molecular formula but different structures are known as:

- Ans 1. structural isomers
 2. isotopes
 3. valencies
 4. allotropes

Question ID : 264330177015
Option 1 ID : 264330694255
Option 2 ID : 264330694256
Option 3 ID : 264330694258
Option 4 ID : 264330694257
Status : Answered
Chosen Option : 4

Q.25 Community Development Programme was under the _____ Five-Year Plan in India.

- Ans 1. Third
 2. Fourth
 3. Second
 4. First

Question ID : 264330120208
Option 1 ID : 264330471088
Option 2 ID : 264330471090
Option 3 ID : 264330471087
Option 4 ID : 264330471089
Status : Not Answered
Chosen Option : --

Q.26 Which of the following countries never hosted the Asian Games till 2022?

- Ans 1. Pakistan
 2. South Korea
 3. China
 4. Japan

Question ID : 264330132518
Option 1 ID : 264330519170
Option 2 ID : 264330519169
Option 3 ID : 264330519167
Option 4 ID : 264330519168
Status : Answered
Chosen Option : 2

Q.27 Which of the following writs are issued only against judicial and quasi-judicial bodies?

- Ans 1. Mandamus and Certiorari
 2. Prohibition and Certiorari
 3. Habeas Corpus and Mandamus
 4. Prohibition and Quo-Warranto

Question ID : 264330110795
Option 1 ID : 264330435459
Option 2 ID : 264330435460
Option 3 ID : 264330435457
Option 4 ID : 264330435458
Status : Answered
Chosen Option : 4

Q.28 What was the subject under investigation for setting up the Hunter commission in 1882?

- Ans
- 1. Famine
 - 2. Agriculture
 - 3. Industry
 - 4. Education

Question ID : 264330120296
Option 1 ID : 264330471438
Option 2 ID : 264330471435
Option 3 ID : 264330471437
Option 4 ID : 264330471436
Status : Answered
Chosen Option : 4

Q.29 Pandit Birju Maharaj was a legendary _____ dancer, who opened his dance school 'Kalashram' in New Delhi.

- Ans
- 1. Kathak
 - 2. Odissi
 - 3. Bharatanatyam
 - 4. Kathakali

Question ID : 264330111964
Option 1 ID : 264330439942
Option 2 ID : 264330439941
Option 3 ID : 264330439943
Option 4 ID : 264330439944
Status : Answered
Chosen Option : 1

Q.30 Who among the following Muslim social reformers propagated his ideas through a magazine 'Tahdib-ul-Akhlaq'?

- Ans
- 1. Muhammad Qasim
 - 2. Rashid Ahmad
 - 3. Ghulam Ahmed
 - 4. Syed Ahmed Khan

Question ID : 264330120310
Option 1 ID : 264330471492
Option 2 ID : 264330471494
Option 3 ID : 264330471493
Option 4 ID : 264330471491
Status : Answered
Chosen Option : 2

Q.31 Which are the most explosive of the earth's volcanoes?

- Ans
- 1. Caldera
 - 2. Composite
 - 3. Mid ocean ridge
 - 4. Flood basalt

Question ID : 264330134901
Option 1 ID : 264330528540
Option 2 ID : 264330528539
Option 3 ID : 264330528541
Option 4 ID : 264330528542
Status : Not Answered
Chosen Option : --

Q.32 KV Prasad, SV Rajarao, Umalayapuram Sivaraman, Palghat Mani Iyer, Karaikudi R Mani and Palghat Raghu are noted players of which of the following instruments?

- Ans
- 1. Pakhawaj
 - 2. Sarangi
 - 3. Ghatam
 - 4. Mridangam

Question ID : 264330144041
Option 1 ID : 264330564429
Option 2 ID : 264330564430
Option 3 ID : 264330564427
Option 4 ID : 264330564428
Status : Not Answered
Chosen Option : --

Q.33 How many types of writs can be issued to protect the Fundamental Rights?

- Ans
- 1. 2
 - 2. 4
 - 3. 3
 - 4. 5

Question ID : 264330173494
Option 1 ID : 264330680455
Option 2 ID : 264330680457
Option 3 ID : 264330680456
Option 4 ID : 264330680458
Status : Answered
Chosen Option : 4

Q.34 The Charminar in Hyderabad is a _____ shaped massive structure with four minarets.

- Ans
- 1. square
 - 2. dome
 - 3. cylindrical
 - 4. rectangular

Question ID : 264330106244
Option 1 ID : 264330417280
Option 2 ID : 264330417277
Option 3 ID : 264330417278
Option 4 ID : 264330417279
Status : Answered
Chosen Option : 1

Q.35 Chandragupta II got his daughter married into which of the following dynasties?

- Ans
- 1. Vakataka dynasty
 - 2. Naga dynasty
 - 3. Shunga dynasty
 - 4. Pushyabhuti dynasty

Question ID : 264330118959
Option 1 ID : 264330466492
Option 2 ID : 264330466493
Option 3 ID : 264330466494
Option 4 ID : 264330466491
Status : Not Answered
Chosen Option : --

Q.36 How many fundamental duties were added in the Indian Constitution in 1976?

- Ans 1. 8
 2. 9
 3. 11
 4. 10

Question ID : 264330113378

Option 1 ID : 264330445599

Option 2 ID : 264330445597

Option 3 ID : 264330445600

Option 4 ID : 264330445598

Status : Answered

Chosen Option : 4

Q.37 Consider the following statements with respect to the limitations of the barter exchange system.

- (i) Lack of standard of deferred payment
(ii) Sufficient double coincidence of wants
(iii) Lack of store of value

Choose the correct answer.

- Ans 1. Only (iii) is true
 2. Only (ii) is true
 3. Only (i) is true
 4. Both (i) and (iii) are true

Question ID : 264330116503

Option 1 ID : 264330458099

Option 2 ID : 264330458098

Option 3 ID : 264330458097

Option 4 ID : 264330458100

Status : Not Answered

Chosen Option : --

Q.38 भारत के संविधान के निम्नलिखित में से किस प्रावधान के लिए संसद के विशेष बहुमत और राज्यों की सहमति की आवश्यकता होती है?

- Ans 1. विधान परिषदों के उन्मूलन और निर्माण
 2. संसद में कोरम
 3. राज्य के नीति निर्देशक सिद्धांत
 4. राष्ट्रपति के चुनाव

Question ID : 264330130472

Option 1 ID : 264330511000

Option 2 ID : 264330511002

Option 3 ID : 264330511001

Option 4 ID : 264330510999

Status : Answered

Chosen Option : 3

Q.39 Which of the following countries will host the ICC T20 Men's Cricket World Cup 2024?

- Ans
- 1. West Indies and Canada
 - 2. West Indies and USA
 - 3. Australia and New Zealand
 - 4. India and Sri Lanka

Question ID : 264330130634
Option 1 ID : 264330511648
Option 2 ID : 264330511647
Option 3 ID : 264330511649
Option 4 ID : 264330511650
Status : Answered
Chosen Option : 2

Q.40 'मानसून (monsoon)' शब्द की व्युत्पत्ति अरबी शब्द 'मौसिम (Mausim)' से हुई है, यह निम्नलिखित में से किसके समतुल्य है?

- Ans
- 1. वर्षा (Rain)
 - 2. तूफ़ान (Storm)
 - 3. मौसम (Season)
 - 4. पवन (Wind)

Question ID : 264330174343
Option 1 ID : 264330683792
Option 2 ID : 264330683793
Option 3 ID : 264330683791
Option 4 ID : 264330683794
Status : Answered
Chosen Option : 3

Q.41 Which of the following churches is NOT located in Goa?

- Ans
- 1. Reis Magos Church
 - 2. Mae De Deus Church
 - 3. Santa Cruz Basilica
 - 4. Basilica of Bom Jesus

Question ID : 264330141818
Option 1 ID : 264330555593
Option 2 ID : 264330555594
Option 3 ID : 264330555591
Option 4 ID : 264330555592
Status : Not Answered
Chosen Option : --

Q.42 Which of the following is a violation of the 7th fundamental duty related to the environment and wildlife?

- Ans
- 1. Trafficking of wildlife animals
 - 2. Work for the betterment of the wildlife
 - 3. To prohibit exploitation of protected species
 - 4. Avoid pollution of water

Question ID : 264330118529
Option 1 ID : 264330465519
Option 2 ID : 264330465518
Option 3 ID : 264330465517
Option 4 ID : 264330465520
Status : Answered
Chosen Option : 1

Q.43 Who among the following Russian political leaders visited India as part of Republic Day celebrations in the year 2007?

- Ans
- 1. Dmitry Medvedev
 - 2. Boris Yeltsin
 - 3. Vladimir Putin
 - 4. Mikhail Mishustin

Question ID : 264330182991
Option 1 ID : 264330717699
Option 2 ID : 264330717698
Option 3 ID : 264330717697
Option 4 ID : 264330717696
Status : Not Answered
Chosen Option : --

Q.44 Which of the following organisations was given statutory power in 1992?

- Ans
- 1. LIC
 - 2. IRDA
 - 3. SEBI
 - 4. RBI

Question ID : 264330109420
Option 1 ID : 264330429960
Option 2 ID : 264330429959
Option 3 ID : 264330429958
Option 4 ID : 264330429957
Status : Answered
Chosen Option : 4

Q.45 On the basis of Total Population (2011), arrange the following states in descending order?

- A) West Bengal
- B) Maharashtra
- C) Bihar

- Ans
- 1. A, C, B
 - 2. B, A, C
 - 3. A, B, C
 - 4. B, C, A

Question ID : 264330167032
Option 1 ID : 264330655131
Option 2 ID : 264330655133
Option 3 ID : 264330655134
Option 4 ID : 264330655132
Status : Answered
Chosen Option : 4

Q.46 Which of the following universities stood first at the Khelo India University Games- 2021?

- Ans** 1. Jain University
 2. University of Mumbai
 3. University of Kerala
 4. Jawaharlal Nehru University

Question ID : 264330113742
Option 1 ID : 264330447056
Option 2 ID : 264330447055
Option 3 ID : 264330447053
Option 4 ID : 264330447054
Status : Answered
Chosen Option : 1

Q.47 In the seventeenth century, Peter Mundy, a foreign traveller from _____ visited India.

- Ans** 1. France
 2. Italy
 3. Germany
 4. England

Question ID : 264330111386
Option 1 ID : 264330437629
Option 2 ID : 264330437631
Option 3 ID : 264330437632
Option 4 ID : 264330437630
Status : Answered
Chosen Option : 4

Q.48 Who launched the official jersey of the fourth Khelo India Youth Games?

- Ans** 1. Anurag Thakur
 2. Amit Shah
 3. Narendra Modi
 4. Nisith Pramanik

Question ID : 264330113747
Option 1 ID : 264330447074
Option 2 ID : 264330447076
Option 3 ID : 264330447075
Option 4 ID : 264330447073
Status : Answered
Chosen Option : 1

Q.49 'Below the Poverty Line' Census was done in the year ____ for the Eighth Five Year Plan.

- Ans** 1. 1989
 2. 1993
 3. 1990
 4. 1992

Question ID : 264330183041
Option 1 ID : 264330717896
Option 2 ID : 264330717899
Option 3 ID : 264330717897
Option 4 ID : 264330717898
Status : Not Answered
Chosen Option : --

Q.50 Aryabhata is believed to be one of the greatest astronomers of the:

- Ans 1. Mauryan Period
 2. Gupta period
 3. Pallava period
 4. Vardhan Period

Question ID : 264330119755
Option 1 ID : 264330469297
Option 2 ID : 264330469296
Option 3 ID : 264330469295
Option 4 ID : 264330469298
Status : Answered
Chosen Option : 2

Section : Reasoning

Q.1 Select the correct mirror image of the given figure when the mirror is placed at PQ as shown below.

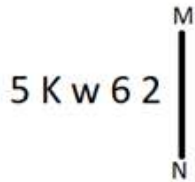
F W M 7 2 d z H



- Ans 1. H z b 5 7 M W F
 2. H z b 5 7 W M F
 3. H z b 2 7 M W F
 4. H z d 2 7 W M F

Question ID : 26433080779
Option 1 ID : 264330317049
Option 2 ID : 264330317052
Option 3 ID : 264330317051
Option 4 ID : 264330317050
Status : Answered
Chosen Option : 1

Q.2 Select the correct mirror image of the given figure when the mirror is placed at MN as shown below.



- Ans
- 1. 2 9 M K 2
 - 2. 2 K w 6 2
 - 3. 2 9 M K 5
 - 4. 2 9 w 5 K

Question ID : 264330166658

Option 1 ID : 264330653672

Option 2 ID : 264330653673

Option 3 ID : 264330653671

Option 4 ID : 264330653674

Status : Answered

Chosen Option : 2

Q.3 Select the option that is related to the fifth letter-cluster in the same way as the second letter-cluster is related to the first letter-cluster and the fourth letter-cluster is related to the third letter-cluster.

FREE : EPBA :: MORE : LMOA :: BURN : ?

- Ans
- 1. AROJ
 - 2. ASPK
 - 3. ASOJ
 - 4. ASOK

Question ID : 26433076456

Option 1 ID : 264330299891

Option 2 ID : 264330299890

Option 3 ID : 264330299888

Option 4 ID : 264330299889

Status : Answered

Chosen Option : 3

Q.4 Select the option that is related to the third term in the same way as the second term is related to the first term and the sixth term is related to the fifth term.

40 : 9 :: 100 : ? :: 50 : 11

- Ans
- 1. 42
 - 2. 21
 - 3. 51
 - 4. 20

Question ID : 264330101044

Option 1 ID : 264330396722

Option 2 ID : 264330396724

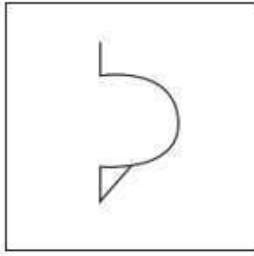
Option 3 ID : 264330396723

Option 4 ID : 264330396721

Status : Answered

Chosen Option : 2

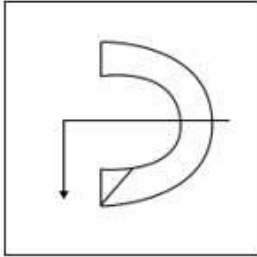
Q.5 Find out the figure amongst the four option in which figure X is embedded (Rotation is not allowed)



(X)

Ans

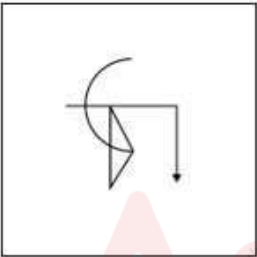
✓ 1.



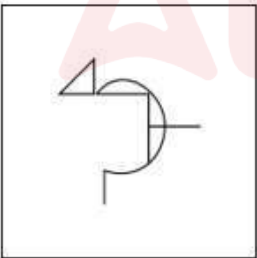
✗ 2.



✗ 3.



✗ 4.



Question ID : 264330121469

Option 1 ID : 264330476060

Option 2 ID : 264330476061

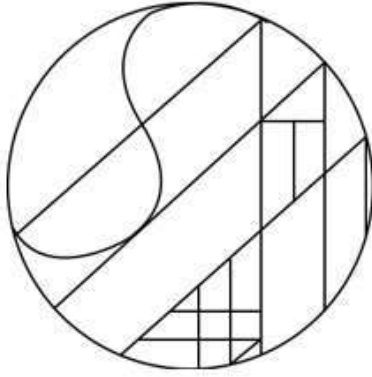
Option 3 ID : 264330476059

Option 4 ID : 264330476062

Status : Answered

Chosen Option : 1

Q.6 Select the option that is embedded in the given figure (rotation is NOT allowed).

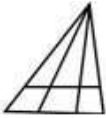


Ans


✓ 1.



✗ 2.



✗ 3.



✗ 4.



Question ID : 264330106418

Option 1 ID : 264330417975

Option 2 ID : 264330417974

Option 3 ID : 264330417976

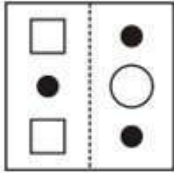
Option 4 ID : 264330417973

Status : Answered

Chosen Option : 1

Adda247

Q.7 A square transparent sheet with a pattern is shown in the given figure. Find out from amongst the following options, as to how the pattern would appear when the transparent sheet is folded at the dotted line.



Ans

- ✗ 1.
- ✗ 2.
- ✗ 3.
- ✓ 4.

Question ID : 264330108979

Option 1 ID : 264330428196

Option 2 ID : 264330428195

Option 3 ID : 264330428193

Option 4 ID : 264330428194

Status : Answered

Chosen Option : 4

Q.8 Which two signs should be interchanged to make the given equation correct?

$$87 \times 2 - 80 \div 8 + 160 = 4$$

- Ans ✗ 1. + and -
- ✓ 2. + and =
- ✗ 3. + and ×
- ✗ 4. + and ÷

Question ID : 26433085738

Option 1 ID : 264330336655

Option 2 ID : 264330336654


Option 3 ID : 264330336653

Option 4 ID : 264330336656

Status : Answered

Chosen Option : 2

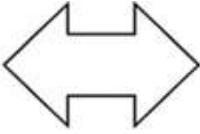
Q.9 Select the option figure which is embedded in the given figure (X) as its part. (rotation is NOT allowed).



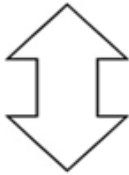
(X)

Ans

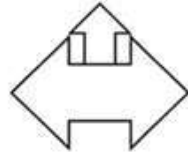
✓ 1.



✗ 2.



✗ 3.



✗ 4.



Question ID : 264330112982

Option 1 ID : 264330444013

Option 2 ID : 264330444015


Option 3 ID : 264330444016

Option 4 ID : 264330444014

Status : Answered

Chosen Option : 3

Q.10 Select the figure from the options that can replace the question mark (?) and complete the given pattern.

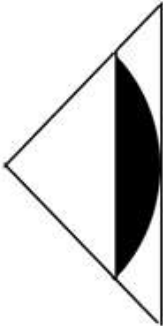


Ans

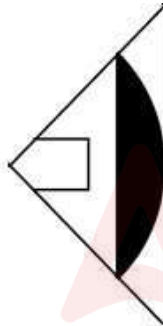
✗ 1.



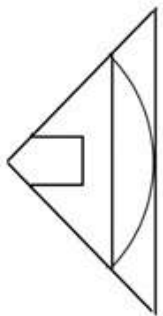
✗ 2.



✓ 3.



✗ 4.



Question ID : 26433082912

Option 1 ID : 264330325483

Option 2 ID : 264330325482

Option 3 ID : 264330325484

Option 4 ID : 264330325481

Status : Answered

Chosen Option : 3

Q.11 Read the given statements and conclusions carefully. Assuming that the information given in the statements is true, even if it appears to be at variance with commonly known facts, decide which of the given conclusions logically follow(s) from the statements.

Statements:

Some trees are rivers.

Some rivers are mountains.

Conclusions:

I. Some mountains are trees.

II. All mountains are trees.

- Ans**
- 1. Only conclusion II follows
 - 2. Only conclusion I follows
 - 3. Neither conclusion I nor II follows
 - 4. Both conclusions I and II follow

Question ID : 26433068286

Option 1 ID : 264330267657

Option 2 ID : 264330267656

Option 3 ID : 264330267659

Option 4 ID : 264330267658

Status : Answered

Chosen Option : 3

Q.12 Select the number from the given options that can replace the question mark (?) in the following series.

1, 2, 8, 48, 384, ?

- Ans**
- 1. 3456
 - 2. 4280
 - 3. 3840
 - 4. 4608

Question ID : 264330106381

Option 1 ID : 264330417825

Option 2 ID : 264330417828

Option 3 ID : 264330417827

Option 4 ID : 264330417826

Status : Answered

Chosen Option : 3

Q.13 In a certain code language, 'STAY' is written as '65' and 'COME' is written as '36'. How will 'LIST' be written in that language?

- Ans**
- 1. 46
 - 2. 56
 - 3. 60
 - 4. 66

Question ID : 26433089409

Option 1 ID : 264330351139

Option 2 ID : 264330351138

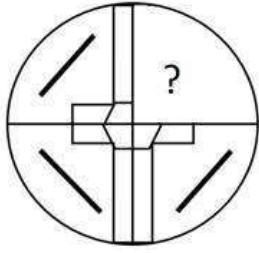
Option 3 ID : 264330351140

Option 4 ID : 264330351137

Status : Answered

Chosen Option : 3

Q.14 Select the figure from the options that can replace the question mark (?) and complete the given pattern.

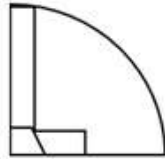


Ans

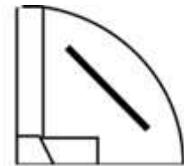
✗ 1.



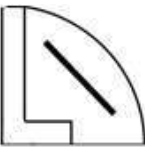
✗ 2.



✓ 3.



✗ 4.



Question ID : 26433082917

Option 1 ID : 264330325503

Option 2 ID : 264330325502

Option 3 ID : 264330325504

Option 4 ID : 264330325501

Status : Answered

Chosen Option : 3

Q.15 Which figure should replace the question mark (?) if the following series were to be continued?

□	☆	↑	U	O	L	U	↑	T	S	
L	O	S	T	□	☆	T	S	S	T	☆
↑	U	L	O	U	↑	S	T	↑	U	?

Ans

✓ 1.

↑	U
T	S
☆	□

✗ 2.

↑	U
T	L
☆	O

✗ 3.

↑	O
T	S
☆	□

✗ 4.

↑	T
O	☆
U	S

Question ID : 264330103864

Option 1 ID : 264330407760

Option 2 ID : 264330407758

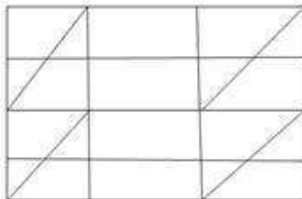
Option 3 ID : 264330407757

Option 4 ID : 264330407759

Status : Answered

Chosen Option : 1

Q.16 How many triangles are there in the following figure?



Ans ✓ 1. 16

✗ 2. 12

✗ 3. 20

✗ 4. 10

Question ID : 26433076731

Option 1 ID : 264330300989

Option 2 ID : 264330300990

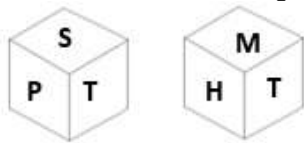
Option 3 ID : 264330300991

Option 4 ID : 264330300988

Status : Answered

Chosen Option : 1

Q.17 Six letters S, T, M, P, H and Q are written on different faces of a dice. Two positions of this dice are shown in the figure. Find the letter on the face opposite to P.



- Ans
- 1. S
 - 2. M
 - 3. T
 - 4. H

Question ID : 264330129792

Option 1 ID : 264330508401

Option 2 ID : 264330508400

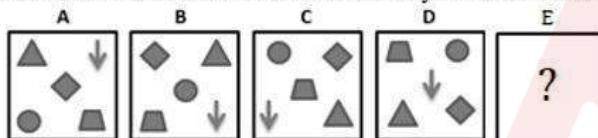
Option 3 ID : 264330508402

Option 4 ID : 264330508399

Status : Answered

Chosen Option : 4

Q.18 Following question consists of 4 figures marked A, B, C and D called the Problem Figures followed by 4 other figures called the Answer Figures. Select a figure from amongst the Answer Figures which will continue the same series as established by the four Problem Figures.



Ans

- 1.
- 2.
- 3.
- 4.

Question ID : 264330110535

Option 1 ID : 264330434417

Option 2 ID : 264330434418

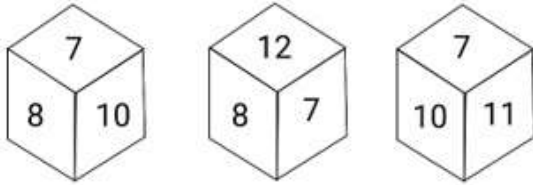
Option 3 ID : 264330434420

Option 4 ID : 264330434419

Status : Answered

Chosen Option : 4

Q.19 Six numbers, 7, 8, 9, 10, 11 and 12 are written on different faces of a dice. Three positions of this dice are shown here. Find the number on the face opposite 7.



- Ans
- 1. 9
 - 2. 11
 - 3. 10
 - 4. 8

Question ID : 264330106397

Option 1 ID : 264330417890

Option 2 ID : 264330417892

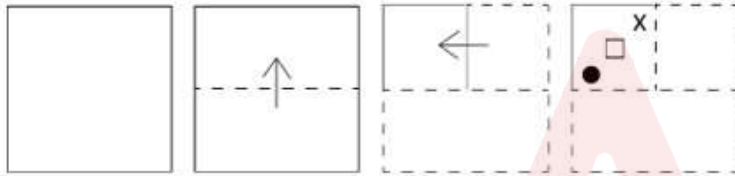
Option 3 ID : 264330417891

Option 4 ID : 264330417889

Status : Answered

Chosen Option : 1

Q.20 A paper is folded and cut as shown below. How will it appear when unfolded?



Ans

- 1.
- 2.
- 3.
- 4.

Question ID : 264330112985

Option 1 ID : 264330444025

Option 2 ID : 264330444028

Option 3 ID : 264330444026

Option 4 ID : 264330444027

Status : Answered

Chosen Option : 3

Q.21 Select the set in which the numbers are related in the same way as are the numbers of the following sets.

(NOTE: Operations should be performed on the whole numbers, without breaking down the numbers into its constituent digits. E.g. 13 – Operations on 13 such as adding/subtracting/multiplying etc. to 13 can be performed. Breaking down 13 into 1 and 3 and then performing mathematical operations on 1 and 3 is not allowed.)

(84, 73, 157)

(96, 88, 184)

Ans 1. (89, 62, 151)

2. (88, 79, 191)

3. (99, 71, 160)

4. (92, 75, 147)

Question ID : 264330175607

Option 1 ID : 264330688749

Option 2 ID : 264330688750

Option 3 ID : 264330688747

Option 4 ID : 264330688748

Status : Answered

Chosen Option : 1

Q.22 Six students are sitting around a circular table facing the centre. Kalki is an immediate neighbour of both Oorja and Namita. Leela is sitting second to the left of Oorja. Padma is sitting second to the right of Kalki. Madhuri is sitting third to the right of Namita. Who is an immediate neighbour of both Kalki and Padma?

Ans 1. Namita

2. Leela

3. Oorja

4. Madhuri

Question ID : 264330110715

Option 1 ID : 264330435140

Option 2 ID : 264330435137

Option 3 ID : 264330435138

Option 4 ID : 264330435139

Status : Answered

Chosen Option : 1

Q.23 Which of the following terms will replace the question mark (?) in the given series?
CVHT, FSJR, IPLP, ?, OJPL

Ans 1. MLNM

2. LNMN

3. LMNN

4. KMNM

Question ID : 264330102173

Option 1 ID : 264330401158

Option 2 ID : 264330401159

Option 3 ID : 264330401157

Option 4 ID : 264330401160

Status : Answered

Chosen Option : 3

Q.24 In the equation given below, which 2 signs need to be interchanged so that it is balanced?

$$\frac{1}{2} + \frac{1}{32} - 5 + 50 \times 80 = 50$$

- Ans
- 1. + and ×
 - 2. × and -
 - 3. + and -
 - 4. + and ×

Question ID : 26433085648
Option 1 ID : 264330336296
Option 2 ID : 264330336294
Option 3 ID : 264330336295
Option 4 ID : 264330336293
Status : Answered
Chosen Option : 2

Q.25 Select the figure that will replace the question mark (?) in the following figure series.



Ans

- 1.
- 2.
- 3.
- 4.

Question ID : 264330112025
Option 1 ID : 264330440185
Option 2 ID : 264330440187
Option 3 ID : 264330440188
Option 4 ID : 264330440186
Status : Answered
Chosen Option : 2

Q.1 Three metallic spheres are of the radius 6 cm, 8 cm and 10 cm, respectively. If they are melted to form a single solid sphere, then the radius of the resulting sphere is:

- Ans
- 1. 48 cm
 - 2. 24 cm
 - 3. 12 cm
 - 4. 36 cm

Question ID : 26433082625
Option 1 ID : 264330324336
Option 2 ID : 264330324333
Option 3 ID : 264330324334
Option 4 ID : 264330324335
Status : Answered
Chosen Option : 3

Q.2 Akash can finish a work in 18 days, while Navin can finish the same work in 36 days. If they work together to finish the work, find the portion of the work done by Navin.

- Ans
- 1. $\frac{1}{3}$
 - 2. $\frac{2}{5}$
 - 3. $\frac{1}{2}$
 - 4. $\frac{2}{3}$

Question ID : 264330103994
Option 1 ID : 264330408278
Option 2 ID : 264330408280
Option 3 ID : 264330408279
Option 4 ID : 264330408277
Status : Answered
Chosen Option : 1

Q.3 A student misread the number 97 as 79 while doing a calculation. Find the percentage increase or decrease in his calculation.

- Ans
- 1. 19% decrease
 - 2. 19.55 % increase
 - 3. 18.55% decrease
 - 4. 18% decrease

Question ID : 264330109240
Option 1 ID : 264330429239
Option 2 ID : 264330429240
Option 3 ID : 264330429238
Option 4 ID : 264330429237
Status : Marked For Review
Chosen Option : 3

Q.4 Susan sold her used mobile phone for ₹4,800 and felt that she incurred a loss of 20%. To earn a profit of 12%, at what price should it have been sold (in ₹)?

- Ans
- 1. 6,000
 - 2. 6,520
 - 3. 6,720
 - 4. 6,780

Question ID : 264330183831
Option 1 ID : 264330721000
Option 2 ID : 264330721001
Option 3 ID : 264330721002
Option 4 ID : 264330721003
Status : Answered
Chosen Option : 3

Q.5 The population of a village increases by 3% per year. If the current population is 75,556, then find the population of the village after 3 years (neglect the decimal part).

- Ans
- 1. 82562
 - 2. 82563
 - 3. 82526
 - 4. 85262

Question ID : 264330104262
Option 1 ID : 264330409350
Option 2 ID : 264330409349
Option 3 ID : 264330409352
Option 4 ID : 264330409351
Status : Answered
Chosen Option : 2

Q.6 The annual salary of Aprajita is 150% of Sonia's annual salary. Sonia's salary rises by 20% after an increment, whereas Aprajita's salary increases by 12%. If the initial salary of Sonia was ₹6,00,000, then what is the salary of Aprajita (in ₹) now after a hike?

- Ans
- 1. 10,08,000
 - 2. 9,00,000
 - 3. 1,08,000
 - 4. 7,20,000

Question ID : 264330112208
Option 1 ID : 264330440920
Option 2 ID : 264330440919
Option 3 ID : 264330440917
Option 4 ID : 264330440918
Status : Answered
Chosen Option : 1

Q.7 The HCF of two numbers is 33 and their sum is 594. Find the total number of such possible pairs of numbers.

- Ans 1. 5
 2. 3
 3. 2
 4. 4

Question ID : 264330104214
Option 1 ID : 264330409157
Option 2 ID : 264330409160
Option 3 ID : 264330409159
Option 4 ID : 264330409158
Status : Answered
Chosen Option : 3

Q.8 The largest 3-digit prime number is:

- Ans 1. 987
 2. 997
 3. 983
 4. 991

Question ID : 264330104484
Option 1 ID : 264330410239
Option 2 ID : 264330410238
Option 3 ID : 264330410240
Option 4 ID : 264330410237
Status : Marked For Review
Chosen Option : 2

Q.9 The marked price of an LED is ₹9,000. The shopkeeper allows a discount of 25% and gains 8%. If no discount is allowed, his gain percentage will be:

- Ans 1. 44%
 2. 42%
 3. 46%
 4. 40%

Question ID : 264330109534
Option 1 ID : 264330430415
Option 2 ID : 264330430414
Option 3 ID : 264330430416
Option 4 ID : 264330430413
Status : Answered
Chosen Option : 1

Q.10 If both the radius and height of a right circular cone are increased by 25%, its volume will be increased by: (Approximation up to two decimal points) (Where $\pi = \frac{22}{7}$)

- Ans
- 1. 90.31%
 - 2. 95.31%
 - 3. 79.55%
 - 4. 85.33%

Question ID : 264330106490
Option 1 ID : 264330418262
Option 2 ID : 264330418264
Option 3 ID : 264330418263
Option 4 ID : 264330418261
Status : Answered
Chosen Option : 2

Q.11 If $P : (Q + R) = 2 : 5$ and $R : (P + Q) = 6 : 7$, then find the value of $Q : (P + R)$.

- Ans
- 1. 23 : 59
 - 2. 23 : 37
 - 3. 23 : 68
 - 4. 23 : 29

Question ID : 264330130092
Option 1 ID : 264330509602
Option 2 ID : 264330509601
Option 3 ID : 264330509599
Option 4 ID : 264330509600
Status : Not Answered
Chosen Option : --

Q.12 $79\frac{7}{40}$ is equivalent to:

- Ans
- 1. 79.0175
 - 2. 79.185
 - 3. 79.085
 - 4. 79.175

Question ID : 264330111441
Option 1 ID : 264330437850
Option 2 ID : 264330437852
Option 3 ID : 264330437851
Option 4 ID : 264330437849
Status : Answered
Chosen Option : 1

Q.13 A woman invests ₹85,000 at a rate of $7\frac{1}{2}\%$ per annum simple interest for 4 years.
What is the amount that she will receive after 4 years?

- Ans** 1. ₹1,10,500
 2. ₹69,600
 3. ₹75,000
 4. ₹1,08,750

Question ID : 264330182524
Option 1 ID : 264330715890
Option 2 ID : 264330715887
Option 3 ID : 264330715889
Option 4 ID : 264330715888
Status : Answered
Chosen Option : 1

Q.14 A boat having a speed of 30 km/h in still water goes 60 km downstream and comes back in 4 hours 30 minutes. The speed of the stream is:

- Ans** 1. 20 km/h
 2. 10 km/h
 3. 30 km/h
 4. 25 km/h

Question ID : 264330183827
Option 1 ID : 264330720984
Option 2 ID : 264330720985
Option 3 ID : 264330720986
Option 4 ID : 264330720987
Status : Answered
Chosen Option : 2

Q.15 In 5 subjects of 100 marks each, a student gets an average of 62 marks and his average in the first four subjects is 5 less than the marks in the fifth subject. How many marks does he get in the fifth subject?

- Ans** 1. 66
 2. 64
 3. 65
 4. 63

Question ID : 264330112065
Option 1 ID : 264330440345
Option 2 ID : 264330440347
Option 3 ID : 264330440346
Option 4 ID : 264330440348
Status : Answered
Chosen Option : 1

Q.1 In MS Excel 365 which of the following will be used to print a spreadsheet?

- Ans
- 1. Home -> open
 - 2. File -> print
 - 3. View -> print
 - 4. Layout -> print

Question ID : 264330178257
Option 1 ID : 264330699085
Option 2 ID : 264330699084
Option 3 ID : 264330699083
Option 4 ID : 264330699086
Status : Answered
Chosen Option : 3

Q.2 Which of the following is a type of network that allows users from outside to access the Intranet of an organisation?

- Ans
- 1. Internet
 - 2. Double Intranet
 - 3. Externet
 - 4. Extranet

Question ID : 264330180392
Option 1 ID : 264330707535
Option 2 ID : 264330707536
Option 3 ID : 264330707538
Option 4 ID : 264330707537
Status : Marked For Review
Chosen Option : 4

Q.3 Which of the following functions is executed if shortcut key Ctrl + I is used in MS Word 365?

- Ans
- 1. Make the text italic
 - 2. Strike through the text
 - 3. Bold the text
 - 4. Underline the text

Question ID : 264330180427
Option 1 ID : 264330707678
Option 2 ID : 264330707677
Option 3 ID : 264330707675
Option 4 ID : 264330707676
Status : Answered
Chosen Option : 1

Q.4 Autocorrect function may be used in MS Word 365, for grammar and spell-check and it is available through:

- Ans
- 1. File→Options→Language
 - 2. File→Options→Display
 - 3. File→Options→Proofing
 - 4. File→Options→General

Question ID : 264330177683
Option 1 ID : 264330696848
Option 2 ID : 264330696850
Option 3 ID : 264330696847
Option 4 ID : 264330696849
Status : Answered
Chosen Option : 3

Q.5 In MS Excel 365, which of the following is a shortcut key to open a new spreadsheet in MS Excel?

- Ans
- 1. Alt + N
 - 2. Alt + O
 - 3. Ctrl + O
 - 4. Ctrl + N

Question ID : 264330180400
Option 1 ID : 264330707570
Option 2 ID : 264330707568
Option 3 ID : 264330707569
Option 4 ID : 264330707567
Status : Answered
Chosen Option : 4

Q.6 You can change how MS Word 365 corrects and formats your text for spelling and grammatical errors by going to File -> Options -> _and _____.

- Ans
- 1. Font settings
 - 2. Proofing
 - 3. Page layout settings
 - 4. Page size settings

Question ID : 264330182346
Option 1 ID : 264330715208
Option 2 ID : 264330715207
Option 3 ID : 264330715209
Option 4 ID : 264330715210
Status : Answered
Chosen Option : 2

Q.7 What does 'CC' stand for in the context of email?

- Ans
- 1. Confidential Content
 - 2. Compose Check
 - 3. Carbon Copy
 - 4. Centralised Communication

Question ID : 264330178543
Option 1 ID : 264330700201
Option 2 ID : 264330700202
Option 3 ID : 264330700200
Option 4 ID : 264330700199
Status : Answered
Chosen Option : 3

Q.8 In MS Excel 365, which of the following is the correct formula to calculate the average of the values in cells A1 to A10?

- Ans
- 1. =AVERAGE(A1:A10)
 - 2. =SUM(A1:A10)/10
 - 3. =AVERAGE(10*A1)
 - 4. =SUM(A1:A10)/100

Question ID : 264330178565
Option 1 ID : 264330700287
Option 2 ID : 264330700288
Option 3 ID : 264330700289
Option 4 ID : 264330700290
Status : Answered
Chosen Option : 2

Q.9 Which of the following shortcut keys is used to switch to print preview in MS Word 2016?

- Ans
- 1. Page Down
 - 2. Ctrl+P
 - 3. Page UP
 - 4. Ctrl+Alt+I

Question ID : 264330178599
Option 1 ID : 264330700426
Option 2 ID : 264330700424
Option 3 ID : 264330700425
Option 4 ID : 264330700423
Status : Answered
Chosen Option : 2

Q.10 What is the primary purpose of creating a table in a word processing document?

- Ans
- 1. To add decorative elements and enhance the visual appeal of the document.
 - 2. To change the page orientation and adjust the margins of the document.
 - 3. To apply different fonts and colours to the text within the table.
 - 4. To organize and present information in a structured and easy-to-read format.

Question ID : 264330173331
Option 1 ID : 264330679803
Option 2 ID : 264330679806
Option 3 ID : 264330679805
Option 4 ID : 264330679804
Status : Answered
Chosen Option : 4

Constable Executive Male and Female in Delhi Police Examination 2023

Roll Number	
Candidate Name	
Venue Name	iON Digital Zone iDZ Bhuchokalan
Exam Date	23/11/2023
Exam Time	9:00 AM - 10:30 AM
Subject	Constable Executive Male and Female in Delhi Police Examination 2023

Section : General Knowledge

Q.1 Who among the following is NOT a tabla player?

Ans 1. Pannalal Ghosh

2. Sabir Khan

3. Zakir Hussain

4. Sandeep Das

Question ID : 26433011932

Option 1 ID : 264330439815

Option 2 ID : 264330439814

Option 3 ID : 264330439816

Option 4 ID : 264330439813

Status : Answered

Chosen Option : 1

Q.2 जतिन गोस्वामी, जिन्हें संगीत नाटक अकादमी फैलोशिप से सम्मानित किया गया था, _____ नृत्य शैली के प्रसिद्ध नर्तक हैं।

Ans 1. कथक

2. छऊ

3. मणिपुरी

4. सत्रिया

Question ID : 26433011978

Option 1 ID : 264330439997

Option 2 ID : 264330439998

Option 3 ID : 264330439999

Option 4 ID : 264330440000

Status : Answered

Chosen Option : 4

Q.3 The melting point of a solid is defined as:

Ans 1. the minimum temperature at which the solid melts to become liquid at the atmospheric pressure

2. the minimum temperature at which the solid melts to become liquid at a high pressure

3. the minimum temperature at which the solid melts to become liquid at a low pressure

4. the maximum temperature at which the solid melts to become liquid at atmospheric pressure

Question ID : 264330173649

Option 1 ID : 264330681075

Option 2 ID : 264330681077

Option 3 ID : 264330681076

Option 4 ID : 264330681078

Status : Answered

Chosen Option : 1

Q.4 Who among the following has played the highest number of ODI matches as the Captain of the Indian cricket team, as of 2021?

- Ans 1. Mahendra Singh Dhoni
 2. Kapil Dev
 3. Sachin Ramesh Tendulkar
 4. Virat Kohli

Question ID : 264330118454
Option 1 ID : 264330465218
Option 2 ID : 264330465219
Option 3 ID : 264330465220
Option 4 ID : 264330465217
Status : Answered
Chosen Option : 3

Q.5 Which of the following schedules vests additional discretionary powers to the Governors of Mizoram and Tripura?

- Ans 1. 6th Schedule
 2. 4th Schedule
 3. 5th Schedule
 4. 7th Schedule

Question ID : 26433086855
Option 1 ID : 264330341063
Option 2 ID : 264330341061
Option 3 ID : 264330341062
Option 4 ID : 264330341064
Status : Answered
Chosen Option : 1

Q.6 विभाजन की कठोर वास्तविकताओं पर आधारित उपन्यास 'कितने पाकिस्तान' के उपन्यासकार _____ हैं।

- Ans 1. फणीश्वर नाथ रेणु
 2. कमलेश्वर
 3. काशी नाथ सिंह
 4. मुंशी प्रेमचंद

Question ID : 26433064628
Option 1 ID : 264330253104
Option 2 ID : 264330253105
Option 3 ID : 264330253107
Option 4 ID : 264330253106
Status : Not Answered
Chosen Option : --

Q.7 What is time period under Article 22 (2) of the Constitution of India for every person who is arrested and detained in custody to be produced before the nearest magistrate?

- Ans 1. Within 24 hours
 2. Within 48 hours
 3. Within 12 hours
 4. Within 30 hours

Question ID : 264330133064
Option 1 ID : 264330521307
Option 2 ID : 264330521310
Option 3 ID : 264330521308
Option 4 ID : 264330521309
Status : Answered
Chosen Option : 1

Q.8 निम्नलिखित में से किस स्थान पर 'अखिल भारतीय मुस्लिम लीग' (All India Muslim League) की स्थापना की गई थी?

- Ans 1. लाहौर
 2. ढाका
 3. कराची
 4. कलकत्ता

Question ID : 264330120298
Option 1 ID : 264330471443
Option 2 ID : 264330471445
Option 3 ID : 264330471446
Option 4 ID : 264330471444
Status : Answered
Chosen Option : 2

Q.9 In which of the following years was there an all-India campaign in opposition to the all-white Simon Commission?

- Ans 1. 1939
 2. 1922
 3. 1942
 4. 1928

Question ID : 264330112408
Option 1 ID : 264330441719
Option 2 ID : 264330441720
Option 3 ID : 264330441718
Option 4 ID : 264330441717
Status : Answered
Chosen Option : 4

Q.10 भारतीय संविधान के किस अनुच्छेद में उल्लेख किया गया है कि किसी भी अपराध के आरोपी व्यक्ति को अपने खिलाफ गवाह बनने के लिए मजबूर नहीं किया जाएगा?

- Ans
- 1. अनुच्छेद 16
 - 2. अनुच्छेद 26
 - 3. अनुच्छेद 20
 - 4. अनुच्छेद 24

Question ID : 264330180870
Option 1 ID : 264330709443
Option 2 ID : 264330709446
Option 3 ID : 264330709444
Option 4 ID : 264330709445
Status : Answered
Chosen Option : 3

Q.11 The Hindustan Socialist Republican Association was founded in _____ by famous revolutionaries like Chandrasekhar Azad, Bhagat Singh, Batukeshwar Dutt and others.

- Ans
- 1. 1921
 - 2. 1928
 - 3. 1925
 - 4. 1919

Question ID : 264330114867
Option 1 ID : 264330451555
Option 2 ID : 264330451553
Option 3 ID : 264330451554
Option 4 ID : 264330451556
Status : Answered
Chosen Option : 2

Q.12 What is the maximum limit of loan under MUDRA Yojana?

- Ans
- 1. ₹1 lakh
 - 2. ₹5 lakh
 - 3. ₹50,000
 - 4. ₹10 lakh

Question ID : 264330110190
Option 1 ID : 264330433038
Option 2 ID : 264330433039
Option 3 ID : 264330433037
Option 4 ID : 264330433040
Status : Answered
Chosen Option : 4

Q.13 Lohri is a popular folk festival of which of these states?

- Ans
- 1. Punjab
 - 2. Goa
 - 3. Gujarat
 - 4. Himachal Pradesh

Question ID : 264330109314
Option 1 ID : 264330429536
Option 2 ID : 264330429535
Option 3 ID : 264330429534
Option 4 ID : 264330429533
Status : Answered
Chosen Option : 1

Q.14 The colossal monolithic statue of Gomateshwara at Shravanabelagola is carved out of a single block of _____ .

- Ans
- 1. marble
 - 2. granite
 - 3. stone
 - 4. rock

Question ID : 264330106248

Option 1 ID : 264330417293

Option 2 ID : 264330417296

Option 3 ID : 264330417294

Option 4 ID : 264330417295

Status : Not Attempted and Marked For Review

Chosen Option : --

Q.15 Which of the following has universal acceptability in discharge of debt & payment obligations?

- Ans
- 1. Bonds
 - 2. Legal tender money
 - 3. Houses
 - 4. Landed property

Question ID : 264330119673

Option 1 ID : 264330468968

Option 2 ID : 264330468967

Option 3 ID : 264330468970

Option 4 ID : 264330468969

Status : Answered

Chosen Option : 4

Q.16 The hydrological cycle deals with _____.

- Ans
- 1. soil
 - 2. water
 - 3. air
 - 4. rocks

Question ID : 264330118518

Option 1 ID : 264330465474

Option 2 ID : 264330465473

Option 3 ID : 264330465476

Option 4 ID : 264330465475

Status : Answered

Chosen Option : 2

Q.17 Sangeet Natak Akademi is a society under which ministry of the Government of India?

- Ans
- 1. Ministry of Home Affairs
 - 2. Ministry of Tourism
 - 3. Ministry of Culture
 - 4. Ministry of Youth Affairs and Sports

Question ID : 264330111208

Option 1 ID : 264330436918

Option 2 ID : 264330436919

Option 3 ID : 264330436917

Option 4 ID : 264330436920

Status : Answered

Chosen Option : 3

Q.18 Which of the following organisations has declared October 2 as the International Day of Non-violence to honour Gandhi's ways?

- Ans**
- 1. International Federation Red Cross and Red Crescent
 - 2. United National General Assembly
 - 3. United Nations Development Fund
 - 4. Amnesty International

Question ID : 264330130871
Option 1 ID : 264330512596
Option 2 ID : 264330512595
Option 3 ID : 264330512598
Option 4 ID : 264330512597
Status : Answered
Chosen Option : 2

Q.19 Which of the following is a communication mail channel to facilitate quick delivery of mails in large towns and cities of India?

- Ans**
- 1. Pink channel
 - 2. State channel
 - 3. Bulk mail channel
 - 4. Small mail channel

Question ID : 264330180511
Option 1 ID : 264330708011
Option 2 ID : 264330708013
Option 3 ID : 264330708014
Option 4 ID : 264330708012
Status : Not Answered
Chosen Option : --

Q.20 Which of the following is NOT the lead bank?

- Ans**
- 1. HDFC Bank
 - 2. Canara Bank
 - 3. State Bank of India
 - 4. Indian bank

Question ID : 264330120088
Option 1 ID : 264330470608
Option 2 ID : 264330470610
Option 3 ID : 264330470609
Option 4 ID : 264330470607
Status : Answered
Chosen Option : 4

Q.21 Who among the following is the writer of 'Train to Pakistan', 'Good, Bad and Ridiculous' and 'Delhi: A Novel'?

- Ans**
- 1. Ruskin Bond
 - 2. Khushwant Singh
 - 3. Vikram Seth
 - 4. Amitav Ghosh

Question ID : 26433071478
Option 1 ID : 264330280339
Option 2 ID : 264330280338
Option 3 ID : 264330280336
Option 4 ID : 264330280337
Status : Answered
Chosen Option : 2

Q.22 In which of the following states/UTs were Khelo India Youth Games 2023 organised?

- Ans 1. Punjab
 2. Madhya Pradesh
 3. Maharashtra
 4. Delhi

Question ID : 264330176943
Option 1 ID : 264330693970
Option 2 ID : 264330693968
Option 3 ID : 264330693969
Option 4 ID : 264330693967
Status : Answered
Chosen Option : 2

Q.23 कृषि सांख्यिकी - एक झलक 2015 के अनुसार, भारत वर्ष 2013 में किस फसल का सबसे बड़ा उत्पादक था, जिसका वैश्विक उत्पादन में लगभग 25 प्रतिशत योगदान होता था?

- Ans 1. बाजरा
 2. दाल
 3. तिलहन
 4. गन्ना

Question ID : 264330120357
Option 1 ID : 264330471682
Option 2 ID : 264330471679
Option 3 ID : 264330471681
Option 4 ID : 264330471680
Status : Answered
Chosen Option : 2

Q.24 To provide opportunities for education to his/her children between the ages of _____ is the fundamental duty of the parents according to the 86th Constitutional Amendment Act.

- Ans 1. 6 to 14
 2. 5 to 18
 3. 4 to 14
 4. 6 to 18

Question ID : 264330114755
Option 1 ID : 264330451107
Option 2 ID : 264330451106
Option 3 ID : 264330451105
Option 4 ID : 264330451108
Status : Answered
Chosen Option : 1

Q.25 Who among the following received the title 'Nur Jahan'?

- Ans 1. Ratan Bai
 2. Hamida Banu
 3. Man Bai
 4. Meherunissa

Question ID : 264330118983
Option 1 ID : 264330466588
Option 2 ID : 264330466587
Option 3 ID : 264330466589
Option 4 ID : 264330466590
Status : Answered
Chosen Option : 2

Q.26 What was the name of the official mascot for the 44th International Chess Olympiad, which was held in India in 2022?

- Ans 1. Thambi
 2. Chess Base
 3. Bathusa Turtlestein
 4. Chess mate

Question ID : 264330113739
Option 1 ID : 264330447043
Option 2 ID : 264330447044
Option 3 ID : 264330447041
Option 4 ID : 264330447042
Status : Not Answered
Chosen Option : --

Q.27 The condition, when the environment becomes enriched with nutrients, increasing the amount of plant and algae growth in estuaries and coastal waters, is called:

- Ans 1. mineralisation
 2. ozone depletion
 3. greenhouse effect
 4. eutrophication

Question ID : 264330111902
Option 1 ID : 264330439694
Option 2 ID : 264330439695
Option 3 ID : 264330439696
Option 4 ID : 264330439693
Status : Answered
Chosen Option : 4

Q.28 How many fundamental rights are provided by the Constitution as of November 2022?

- Ans 1. 5
 2. 7
 3. 8
 4. 6

Question ID : 264330120507
Option 1 ID : 264330472279
Option 2 ID : 264330472281
Option 3 ID : 264330472282
Option 4 ID : 264330472280
Status : Answered
Chosen Option : 4

Q.29 The Tumakuru mining belt is located in which state?

- Ans 1. Odisha
 2. Jharkhand
 3. Rajasthan
 4. Karnataka

Question ID : 264330181229
Option 1 ID : 264330710841
Option 2 ID : 264330710840
Option 3 ID : 264330710842
Option 4 ID : 264330710839
Status : Not Answered
Chosen Option : --

Q.30 The Brihadeshwara Temple at Thanjavur was built by which of these rulers?

- Ans 1. Raja Raja Chola I
 2. Rajadhiraja Chola II
 3. Raja Raja Chola III
 4. Rajendra Chola III

Question ID : 264330109323
Option 1 ID : 264330429570
Option 2 ID : 264330429571
Option 3 ID : 264330429569
Option 4 ID : 264330429572
Status : Answered
Chosen Option : 1

Q.31 Pandit Gopal Prasad Dubey won the Padma Shri for which form of dance?

- Ans 1. Kathakali
 2. Bihu
 3. Chhau
 4. Sattriya

Question ID : 26433074879
Option 1 ID : 264330293607
Option 2 ID : 264330293604
Option 3 ID : 264330293606
Option 4 ID : 264330293605
Status : Answered
Chosen Option : 1

Q.32 निम्नलिखित में से किस नीति में घरेलू अर्थव्यवस्था को वैश्विक अर्थव्यवस्था के साथ एकीकृत करना शामिल है?

- Ans 1. भूमंडलीकरण (वैश्वीकरण)
 2. निजीकरण
 3. उदारीकरण
 4. पूंजीवादी अर्थव्यवस्था

Question ID : 264330110181
Option 1 ID : 264330433001
Option 2 ID : 264330433002
Option 3 ID : 264330433003
Option 4 ID : 264330433004
Status : Answered
Chosen Option : 4

Q.33 Kongampattu AV Murugaiyan, a _____ exponent, was awarded the Padma Shri in 2022.

- Ans 1. dholak
 2. sitar
 3. thavil
 4. guitar

Question ID : 264330111952
Option 1 ID : 264330439895
Option 2 ID : 264330439894
Option 3 ID : 264330439893
Option 4 ID : 264330439896
Status : Answered
Chosen Option : 4

Q.34 The ground water of Bihar and West Bengal is mostly contaminated by which metal?

- Ans 1. Radium
 2. Mercury
 3. Arsenic
 4. Lead

Question ID : 264330131821
Option 1 ID : 264330516386
Option 2 ID : 264330516385
Option 3 ID : 264330516383
Option 4 ID : 264330516384
Status : Answered
Chosen Option : 3

Q.35 How many general electoral rolls are there for every territorial constituency for election of the Parliament?

- Ans 1. 3
 2. 1
 3. 4
 4. 2

Question ID : 264330173520
Option 1 ID : 264330680561
Option 2 ID : 264330680559
Option 3 ID : 264330680562
Option 4 ID : 264330680560
Status : Not Answered
Chosen Option : --

Q.36 The Jaffna Peninsula, known for its cultural heritage and Tamil population, is located in which part of Sri Lanka?

- Ans 1. Eastern Province
 2. Northern Province
 3. Western Province
 4. Central Province

Question ID : 264330179305
Option 1 ID : 264330703224
Option 2 ID : 264330703223
Option 3 ID : 264330703225
Option 4 ID : 264330703226
Status : Answered
Chosen Option : 2

Q.37 Which of the following is NOT responsible for hypertension?

- Ans 1. Excess weight and lack of exercise
 2. Intake of nicotine either through smoking or chewing tobacco
 3. Living under stress and worry
 4. Consuming less salt

Question ID : 264330177325
Option 1 ID : 264330695493
Option 2 ID : 264330695491
Option 3 ID : 264330695492
Option 4 ID : 264330695494
Status : Answered
Chosen Option : 4

Q.38 Pavri Naach, a tribal dance of Maharashtra and Gujarat region is performed by which of the following tribes?

- Ans
- 1. Kokna
 - 2. Khatola
 - 3. Koli
 - 4. Kalanga

Question ID : 264330110430
Option 1 ID : 264330433999
Option 2 ID : 264330434000
Option 3 ID : 264330433997
Option 4 ID : 264330433998
Status : Not Answered
Chosen Option : --

Q.39 The National Social Assistance Programme (NSAP) is a welfare programme being administered by the _____.

- Ans
- 1. Ministry of Women and Child Development
 - 2. Ministry of Social Justice and Empowerment
 - 3. Ministry of Rural Development
 - 4. Ministry of Home Affairs

Question ID : 264330120341
Option 1 ID : 264330471617
Option 2 ID : 264330471618
Option 3 ID : 264330471616
Option 4 ID : 264330471615
Status : Not Answered
Chosen Option : --

Q.40 Which of the following cities hosted the 44th World Chess Olympiad in 2022?

- Ans
- 1. Kolkata
 - 2. Mumbai
 - 3. New Delhi
 - 4. Chennai

Question ID : 264330118446
Option 1 ID : 264330465188
Option 2 ID : 264330465187
Option 3 ID : 264330465185
Option 4 ID : 264330465186
Status : Not Answered
Chosen Option : --

Q.41 During which year was the first Industrial Policy Resolution passed?

- Ans
- 1. 1957
 - 2. 1967
 - 3. 1948
 - 4. 1958

Question ID : 264330118250
Option 1 ID : 264330464817
Option 2 ID : 264330464816
Option 3 ID : 264330464815
Option 4 ID : 264330464818
Status : Answered
Chosen Option : 3

Q.42 सातवाहन साम्राज्य के अधीन प्रशासन का सबसे निचला स्तर एक ग्राम था, जो एक _____ की देख-रेख के अधीन था।

- Ans
- 1. राजुक
 - 2. अमात्य
 - 3. ग्रामिक
 - 4. नागरिक

Question ID : 264330114817
Option 1 ID : 264330451355
Option 2 ID : 264330451353
Option 3 ID : 264330451354
Option 4 ID : 264330451356
Status : Not Answered
Chosen Option : --

Q.43 A removal motion of a judge must be signed by _____ members if it is initiated in the Lok Sabha.

- Ans
- 1. 75
 - 2. 50
 - 3. 100
 - 4. 54

Question ID : 264330120173
Option 1 ID : 264330470949
Option 2 ID : 264330470947
Option 3 ID : 264330470950
Option 4 ID : 264330470948
Status : Not Answered
Chosen Option : --

Q.44 As per the Industrial Policy Resolution 1956, Schedule B comprises of _____ industries.

- Ans
- 1. 14
 - 2. 12
 - 3. 13
 - 4. 15

Question ID : 264330116523
Option 1 ID : 264330458178
Option 2 ID : 264330458180
Option 3 ID : 264330458179
Option 4 ID : 264330458177
Status : Answered
Chosen Option : 4

Q.45 According to the 2011 census, how many districts were there in India?

- Ans
- 1. 610
 - 2. 570
 - 3. 640
 - 4. 680

Question ID : 264330120323
Option 1 ID : 264330471544
Option 2 ID : 264330471546
Option 3 ID : 264330471545
Option 4 ID : 264330471543
Status : Not Answered
Chosen Option : --

Q.46 Which of the following reports or missions mainly recommended that control over some aspects of provincial government be passed to Indian ministers responsible to an Indian electorate?

- Ans
- 1. Morley Minto report
 - 2. Cripps' Mission
 - 3. Montagu Chelmsford report
 - 4. Simon Commission report

Question ID : 264330118995
Option 1 ID : 264330466636
Option 2 ID : 264330466638
Option 3 ID : 264330466637
Option 4 ID : 264330466635
Status : Answered
Chosen Option : 2

Q.47 Which of the following is the most common saccharide found in peach juice puree, accounting for about 55% to 80% of the total sugar content?

- Ans
- 1. Galactose
 - 2. Oligofructose
 - 3. Raffinose
 - 4. Sucrose

Question ID : 264330131004
Option 1 ID : 264330513130
Option 2 ID : 264330513128
Option 3 ID : 264330513127
Option 4 ID : 264330513129
Status : Answered
Chosen Option : 2

Q.48 भारत में पुरापाषाण युग के कितने चरण हैं?

- Ans
- 1. तीन
 - 2. एक
 - 3. दो
 - 4. चार

Question ID : 264330134579
Option 1 ID : 264330527272
Option 2 ID : 264330527274
Option 3 ID : 264330527271
Option 4 ID : 264330527273
Status : Answered
Chosen Option : 1

Q.49 Which of the following elements was NOT part of the Financial Sector Reforms under the Liberalisation Model?

- Ans
- 1. Permission to set up private banks
 - 2. Setting of new branches without RBI approval
 - 3. Investment limit in foreign banks up to 74%
 - 4. RBI's role was enhanced to gain control over banks

Question ID : 264330111609

Option 1 ID : 264330438522

Option 2 ID : 264330438523

Option 3 ID : 264330438521

Option 4 ID : 264330438524

Status : Answered

Chosen Option : 4

Q.50 मातृ पक्ष की ओर से, मुग़ल _____ के वंशज थे।

- Ans
- 1. चंगेज़ ख़ां
 - 2. ताजुद्दीन यल्दौज़
 - 3. तैमूर
 - 4. मोहम्मद गोरी

Question ID : 264330182273

Option 1 ID : 264330714917

Option 2 ID : 264330714918

Option 3 ID : 264330714915

Option 4 ID : 264330714916

Status : Answered

Chosen Option : 1

Section : Reasoning

Q.1 Which two signs should be interchanged to make the given equation correct?

$$335 \times 5 \div 7 + 65 - 213 = 321$$

- Ans
- 1. + and =
 - 2. ÷ and ×
 - 3. + and -
 - 4. + and ÷

Question ID : 26433090219

Option 1 ID : 264330354354

Option 2 ID : 264330354355

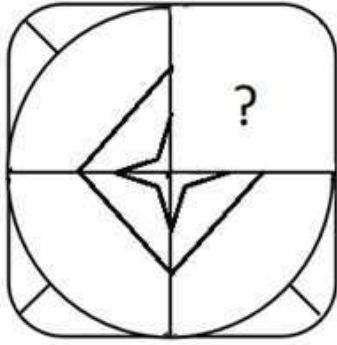
Option 3 ID : 264330354356

Option 4 ID : 264330354353

Status : Answered

Chosen Option : 2

Q.2 Select the option figure that will replace the question mark (?) in the figure given below to complete the pattern.



Ans

1.



2.



3.



4.



Question ID : 264330112055

Option 1 ID : 264330440306

Option 2 ID : 264330440305

Option 3 ID : 264330440308

Option 4 ID : 264330440307

Status : Answered

Chosen Option : 2

Q.3 Select the option that is related to the fifth letter cluster in the same way as the second letter cluster is related to the first letter cluster and the fourth letter cluster is related to the third letter cluster.

KFUB : BKLG :: PNTD : GSKI :: IVFQ : ?

Ans 1. ZAWV

2. WKNY

3. ZDPA

4. WNZA

Question ID : 26433074696

Option 1 ID : 264330292874

Option 2 ID : 264330292875

Option 3 ID : 264330292873

Option 4 ID : 264330292872

Status : Answered

Chosen Option : 1

Q.4 Three different positions of the same dice are shown (Figures 1-3). Find the number on the face opposite to the face showing '2'.

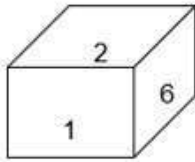


Figure 1

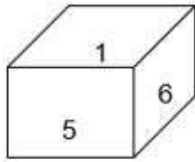


Figure 2

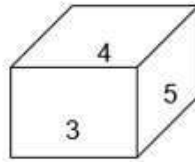


Figure 3

- Ans
- 1. 4
 - 2. 1
 - 3. 5
 - 4. 3

Question ID : 264330117296

Option 1 ID : 264330461244

Option 2 ID : 264330461241

Option 3 ID : 264330461243

Option 4 ID : 264330461242

Status : Answered

Chosen Option : 3

Q.5 Select the correct mirror image of the given combination when the mirror is placed at MN as shown below.



- Ans
- 1. y4eɹɹbɹ
 - 2. E49t5qeY
 - 3. y4eɹɹbɹE
 - 4. E4eɹɹbɹY

Question ID : 264330117002

Option 1 ID : 264330460089

Option 2 ID : 264330460092

Option 3 ID : 264330460091

Option 4 ID : 264330460090

Status : Answered

Chosen Option : 1

Q.6 Which figure should replace the question mark (?) if the series were to be continued?

P I C E S I	P O S E E	E I P O A	I E M A O	?
-------------	-----------	-----------	-----------	---

Ans

1. O I E M A

2. O I E M X

3. X I O M A

4. X I E M A

Question ID : 264330130793

Option 1 ID : 264330512284

Option 2 ID : 264330512283

Option 3 ID : 264330512286

Option 4 ID : 264330512285

Status : Answered

Chosen Option : 2

Q.7 Select the option that is related to the fourth number in the same way as the first number is related to the second number and the fifth number is related to the sixth number.

121 : 23 :: ? : 14 :: 166 : 32

Ans 1. 80

2. 81

3. 76

4. 71

Question ID : 26433052020

Option 1 ID : 264330203383

Option 2 ID : 264330203384

Option 3 ID : 264330203385

Option 4 ID : 264330203382

Status : Answered

Chosen Option : 3

Q.8 Two statements are given followed by two conclusions numbered I and II. Assuming the statements to be true, even if they seem to be at variance with commonly known facts, decide which of the conclusions logically follow(s) from the statements.

Statements:

Some balloons are bags.

All belts are bags.

Conclusions:

I. Some bags are balloons.

II. Some belts are balloons.

- Ans
- 1. Only conclusion II follows
 - 2. Neither conclusion I nor II follows
 - 3. Only conclusion I follows
 - 4. Both conclusions I and II follow

Question ID : 26433068873

Option 1 ID : 264330270005

Option 2 ID : 264330270007

Option 3 ID : 264330270004

Option 4 ID : 264330270006

Status : Answered

Chosen Option : 4

Q.9 छह विद्यार्थी एक गोल मेज के परितः केंद्र की ओर अभिमुख होकर बैठे हैं। पलक और रूचि दोनों का निकटतम पड़ोसी साहिल है। तनय, पलक के बाएं से दूसरे स्थान पर बैठा है। उर्मी, रूचि के दाएं से तीसरे स्थान पर बैठी है। रूचि और तनय दोनों का निकटतम पड़ोसी क्रासिम है। उर्मी और क्रासिम दोनों का निकटतम पड़ोसी कौन है?

- Ans
- 1. रूचि
 - 2. तनय
 - 3. पलक
 - 4. साहिल

Question ID : 264330110711

Option 1 ID : 264330435121

Option 2 ID : 264330435124

Option 3 ID : 264330435123

Option 4 ID : 264330435122

Status : Answered

Chosen Option : 2

Q.10 1, 2, 3, 4, 5 and 6 are written on different faces of a dice. Three different positions of the same dice are shown below. Find the number on the face opposite to the one showing '5'.

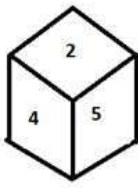


figure 1

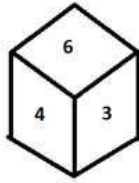


figure 2

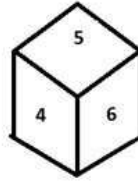


figure 3

- Ans
- 1. 2
 - 2. 6
 - 3. 3
 - 4. 1

Question ID : 264330106479

Option 1 ID : 264330418219

Option 2 ID : 264330418220

Option 3 ID : 264330418217

Option 4 ID : 264330418218

Status : Answered

Chosen Option : 3

Adda247

Q.11 Which figure should replace the question mark (?) in the following series to continue the pattern?

	X		8		B		8		
8	B	△	X	V	B	8	♡	△	B X ♡
	V			△		X		△	
									?

Ans

✓ 1.

			♡
8	C	△	
		B	

✗ 2.

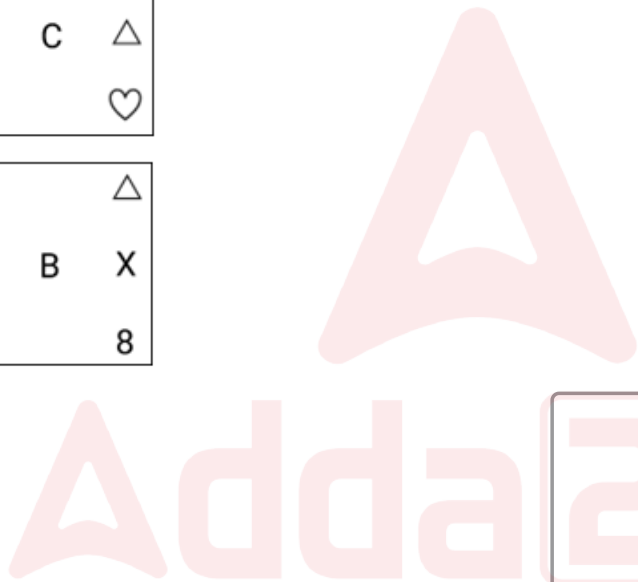
			♡
C	8	△	
		X	

✗ 3.

			B
8	C	△	
		♡	

✗ 4.

			△
♡	B	X	
		8	



Question ID : 264330129612

Option 1 ID : 264330507817

Option 2 ID : 264330507816

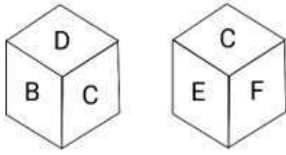
Option 3 ID : 264330507814

Option 4 ID : 264330507815

Status : Answered

Chosen Option : 1

Q.12 Six letters A, B, C, D, E and F are written on different faces of a dice. Two positions of this dice are shown in the figure. Find the letter on the face opposite to 'D'.



- Ans
- 1. F
 - 2. E
 - 3. B
 - 4. A

Question ID : 264330106415
Option 1 ID : 264330417963
Option 2 ID : 264330417964
Option 3 ID : 264330417961
Option 4 ID : 264330417962
Status : Answered
Chosen Option : 2

Q.13 Select the option that represents the letters that, when sequentially placed from left to right in the blanks below, will complete the letter series.

b _ d _ p b c _ p _ _ c _ p p b _ _ p p

- Ans
- 1. cpdpdbdc
 - 2. cpdpbdcd
 - 3. cdppbdcd
 - 4. pcdpbdcd

Question ID : 26433095973
Option 1 ID : 264330376663
Option 2 ID : 264330376661
Option 3 ID : 264330376662
Option 4 ID : 264330376664
Status : Answered
Chosen Option : 2

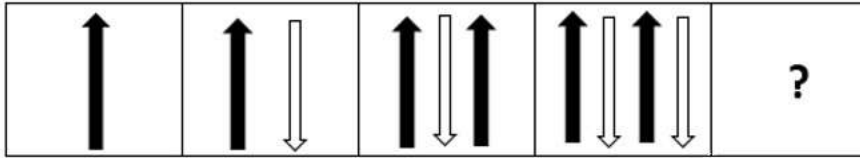
Q.14 Select the number from among the given options that can replace the question mark (?) in the following series.

21, 22, 24, 28, 36, ?

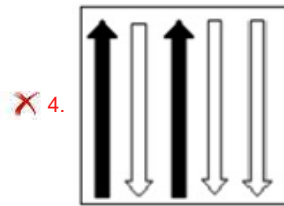
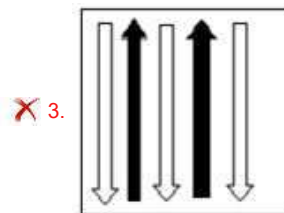
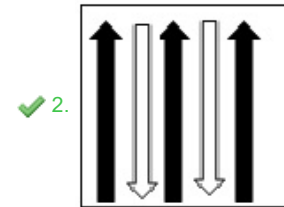
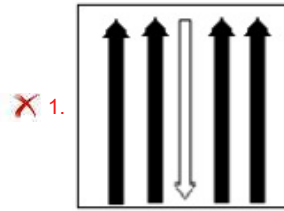
- Ans
- 1. 67
 - 2. 52
 - 3. 43
 - 4. 47

Question ID : 264330109766
Option 1 ID : 264330431344
Option 2 ID : 264330431343
Option 3 ID : 264330431341
Option 4 ID : 264330431342
Status : Answered
Chosen Option : 2

Q.15 Select the figure that will replace the question mark (?) in the following figure series.



Ans



Question ID : 264330108960

Option 1 ID : 264330428119

Option 2 ID : 264330428117

Option 3 ID : 264330428120

Option 4 ID : 264330428118

Status : Answered

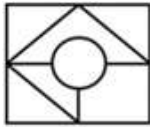
Chosen Option : 2

Q.16 Select the option in which the given figure is embedded (rotation is NOT allowed).

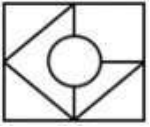


Ans

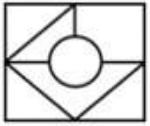
✓ 1.



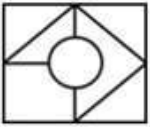
✗ 2.



✗ 3.



✗ 4.



Question ID : 264330101172

Option 1 ID : 264330397236

Option 2 ID : 264330397233

Option 3 ID : 264330397235

Option 4 ID : 264330397234

Status : Answered

Chosen Option : 1

Q.17 Select the correct combination of mathematical signs that can sequentially replace the * signs and balance the given equation.
18*14*6*16*4*254

Ans ✗ 1. +, x, -, =, +

✗ 2. +, -, x, +, =

✓ 3. x, +, -, +, =

✗ 4. +, x, -, +, =

Question ID : 26433079088

Option 1 ID : 264330310358

Option 2 ID : 264330310357

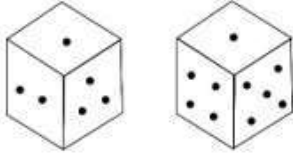
Option 3 ID : 264330310359

Option 4 ID : 264330310356

Status : Answered

Chosen Option : 3

Q.18 Observe the dots on a dice (one to six dots) in the following figures. How many dots are contained on the face opposite to that containing four dots?



- Ans
- 1. Six
 - 2. Two
 - 3. One
 - 4. Five

Question ID : 264330111300

Option 1 ID : 264330437287

Option 2 ID : 264330437286

Option 3 ID : 264330437288

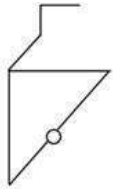
Option 4 ID : 264330437285

Status : Answered

Chosen Option : 2

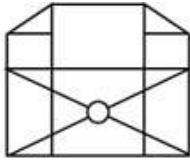


Q.19 Select the option in which the given figure is embedded (rotation is NOT allowed).

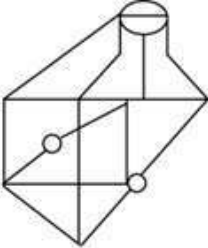


Ans

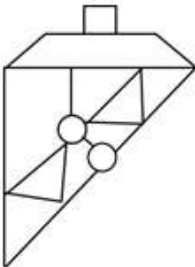
✗ 1.



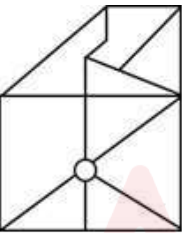
✓ 2.



✗ 3.



✗ 4.



Question ID : 264330114687

Option 1 ID : 264330450834

Option 2 ID : 264330450835

Option 3 ID : 264330450836

Option 4 ID : 264330450833

Status : Answered

Chosen Option : 2

Q.20 Which of the following option figures will complete the pattern in the figure given below?



Ans

✗ 1.



✗ 2.



✓ 3.



✗ 4.



Question ID : 26433089618

Option 1 ID : 264330351973

Option 2 ID : 264330351976

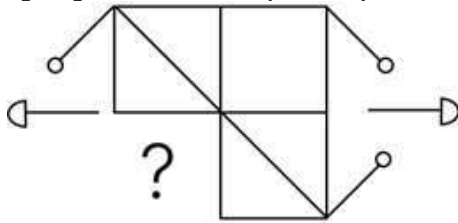
Option 3 ID : 264330351974

Option 4 ID : 264330351975

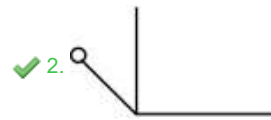
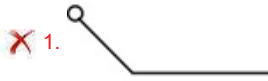
Status : Answered

Chosen Option : 3

Q.21 Select the figure from the given options that will replace the question mark (?) in the figure given below to complete the pattern so that the final image is symmetrical.



Ans



Question ID : 264330114731

Option 1 ID : 264330451012

Option 2 ID : 264330451010

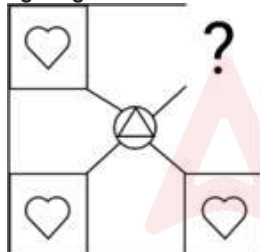
Option 3 ID : 264330451009

Option 4 ID : 264330451011

Status : Answered

Chosen Option : 2

Q.22 Select the figure from the given options that will replace the question mark (?) in the figure given below and complete the pattern.



Ans



Question ID : 264330111708

Option 1 ID : 264330438920

Option 2 ID : 264330438918

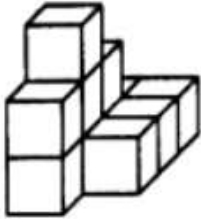
Option 3 ID : 264330438919

Option 4 ID : 264330438917

Status : Answered

Chosen Option : 4

Q.23 How many cubes are there in the given figure?



- Ans
- 1. 17
 - 2. 5
 - 3. 11
 - 4. 15

Question ID : 26433080662

Option 1 ID : 264330316583

Option 2 ID : 264330316584

Option 3 ID : 264330316581

Option 4 ID : 264330316582

Status : Answered

Chosen Option : 3

Q.24 Select the set in which the numbers are related in the same way as are the numbers of the following sets.

(NOTE: Operations should be performed on the whole numbers, without breaking down the numbers into its constituent digits. E.g. 13 – Operations on 13 such as adding/subtracting/multiplying etc. to 13 can be performed. Breaking down 13 into 1 and 3 and then performing mathematical operations on 1 and 3 is not allowed)

(12, 26, 57)
(13, 27, 60)

- Ans
- 1. (8, 91, 83)
 - 2. (19, 25, 66)
 - 3. (17, 21, 38)
 - 4. (45, 64, 119)

Question ID : 26433087214

Option 1 ID : 264330342495

Option 2 ID : 264330342496

Option 3 ID : 264330342493

Option 4 ID : 264330342494

Status : Answered

Chosen Option : 2

Q.25 In a certain code language, 'NATION' is written as 'RZLRQM' and 'MARINE' is written as 'SZNRVV'. How will 'ADVICE' be written as in that language?

- Ans
- 1. FNERCV
 - 2. EWJRCV
 - 3. ERZCWW
 - 4. FNZPVR

Question ID : 26433082948

Option 1 ID : 264330325625

Option 2 ID : 264330325628

Option 3 ID : 264330325626

Option 4 ID : 264330325627

Status : Answered

Chosen Option : 2

Q.1 Arun receives a monthly salary. The ratio of his expenditure to savings is 8 : 2. What percentage of his salary does he spend?

- Ans
- 1. 80%
 - 2. 60%
 - 3. 40%
 - 4. 20%

Question ID : 264330129404
Option 1 ID : 264330506983
Option 2 ID : 264330506982
Option 3 ID : 264330506985
Option 4 ID : 264330506984
Status : Answered
Chosen Option : 4

Q.2 A man can complete a work in 15 days, and a woman can complete the same work in 25 days. In how many days will 3 men and 5 women complete the same work?

- Ans
- 1. 3.5
 - 2. 2
 - 3. 2.5
 - 4. 5

Question ID : 264330104266
Option 1 ID : 264330409365
Option 2 ID : 264330409367
Option 3 ID : 264330409366
Option 4 ID : 264330409368
Status : Answered
Chosen Option : 3

Q.3 If $P : Q = 5 : 3$, then find the value of $(P^4 - Q^4) : (P^4 + Q^4)$.

- Ans
- 1. 227 : 335
 - 2. - 227 : 353
 - 3. - 272 : 353
 - 4. 272 : 353

Question ID : 264330130091
Option 1 ID : 264330509597
Option 2 ID : 264330509598
Option 3 ID : 264330509595
Option 4 ID : 264330509596
Status : Answered
Chosen Option : 4

Q.4 A cone shape tent is made with canvas. The radius of the tent is 7 units and total 308 square units of canvas is used to make it. What is the volume of the tent in cubic units?

(Take $\pi = \frac{22}{7}$)

- Ans
- 1. $1087\sqrt{3}$
 - 2. $1078\sqrt{3}$
 - 3. $\frac{1078}{\sqrt{3}}$
 - 4. $\frac{1087}{\sqrt{3}}$

Question ID : 264330112121

Option 1 ID : 264330440569

Option 2 ID : 264330440571

Option 3 ID : 264330440572

Option 4 ID : 264330440570

Status : Answered

Chosen Option : 3

Q.5 Ratnesh marked the price of a pencil box at ₹80. What is the cost price (in ₹) of the pencil box if after giving a discount of 10%, Ratnesh still gains 20%?

- Ans
- 1. 58
 - 2. 60
 - 3. 72
 - 4. 70

Question ID : 264330123977

Option 1 ID : 264330485743

Option 2 ID : 264330485742

Option 3 ID : 264330485740

Option 4 ID : 264330485741

Status : Answered

Chosen Option : 2

Q.6 वह अधिकतम संभावित लंबाई ज्ञात करें जिसका उपयोग 5 मीटर 95 सेंटीमीटर, 8 मीटर और 16 मीटर 65 सेंटीमीटर की लंबाई को सटीकता से मापने के लिए किया जा सकता है?

- Ans
- 1. 5 सेंटीमीटर
 - 2. 50 मीटर
 - 3. 50 सेंटीमीटर
 - 4. 5 मीटर

Question ID : 264330104333

Option 1 ID : 264330409634

Option 2 ID : 264330409636

Option 3 ID : 264330409635

Option 4 ID : 264330409633

Status : Answered

Chosen Option : 1

Q.7 A person sells two articles for ₹5,000 each with no loss and no profit in the overall transaction. If one is sold at a $16\frac{2}{3}\%$ loss, then the other is sold at a profit of:

- Ans
- 1. 24%
 - 2. 25%
 - 3. 20%
 - 4. 15%

Question ID : 264330103664
Option 1 ID : 264330406963
Option 2 ID : 264330406962
Option 3 ID : 264330406961
Option 4 ID : 264330406964
Status : Answered
Chosen Option : 3

Q.8 A music player is sold for ₹4,510 cash, or ₹1,200 cash down payment and the balance in three equal easy installments. If 10% is the rate of interest compounded annually, find the amount of instalment.

- Ans
- 1. ₹1,331
 - 2. ₹1,330
 - 3. ₹1,333
 - 4. ₹1,332

Question ID : 264330106010
Option 1 ID : 264330416342
Option 2 ID : 264330416341
Option 3 ID : 264330416344
Option 4 ID : 264330416343
Status : Answered
Chosen Option : 1

Q.9 The population of a town decreased from 3,68,000 in 2017 to 3,27,200 in 2020. What is the percentage decrease (to the nearest integer) in the population of the town?

- Ans
- 1. 10%
 - 2. 12%
 - 3. 15%
 - 4. 11%

Question ID : 264330103516
Option 1 ID : 264330406370
Option 2 ID : 264330406369
Option 3 ID : 264330406372
Option 4 ID : 264330406371
Status : Answered
Chosen Option : 4

Q.10 If a, b, c, d and e are distinct prime numbers and the sum of these five numbers is odd, then $a + b + c + d$ is:

- Ans
- 1. an even prime number
 - 2. an odd prime number
 - 3. an odd number
 - 4. an even number

Question ID : 264330111450
Option 1 ID : 264330437887
Option 2 ID : 264330437888
Option 3 ID : 264330437886
Option 4 ID : 264330437885
Status : Answered
Chosen Option : 4

Q.11 Which of the following pairs of numbers are relatively prime to each other?

- Ans
- 1. (51, 119)
 - 2. (98, 567)
 - 3. (27, 51)
 - 4. (103, 113)

Question ID : 264330104483
Option 1 ID : 264330410236
Option 2 ID : 264330410235
Option 3 ID : 264330410234
Option 4 ID : 264330410233
Status : Answered
Chosen Option : 4

Q.12 If Ram walks at a speed of 8 km/h, he misses a train by 7 minutes. However, if he walks at a speed of 10 km/h, he reaches the station 5 minutes before the departure of the train. Find the distance (in km) between Ram's house and the station.

- Ans
- 1. 9
 - 2. 7
 - 3. 6
 - 4. 8

Question ID : 264330104319
Option 1 ID : 264330409580
Option 2 ID : 264330409577
Option 3 ID : 264330409578
Option 4 ID : 264330409579
Status : Answered
Chosen Option : 1

Q.13 A closed metallic cylindrical box is 1.08 m high and its base radius is 42 cm. If the sheet of metal costs ₹90 per m², then the cost of the material used in the box is:

(Where $\pi = \frac{22}{7}$)

- Ans**
- 1. ₹555.8
 - 2. ₹356.4
 - 3. ₹456.5
 - 4. ₹750.4

Question ID : 264330118149

Option 1 ID : 264330464414

Option 2 ID : 264330464411

Option 3 ID : 264330464412

Option 4 ID : 264330464413

Status : Answered

Chosen Option : 2

Q.14 A cricketer has an average score of 52 runs in 10 innings. Find the number of runs to be scored by him in the 11th inning to raise the average score to 58.

- Ans**
- 1. 98
 - 2. 107
 - 3. 122
 - 4. 118

Question ID : 264330118042

Option 1 ID : 264330463985

Option 2 ID : 264330463986

Option 3 ID : 264330463983

Option 4 ID : 264330463984

Status : Answered

Chosen Option : 4

Q.15 A person borrows ₹12,000 for 3 years at 2% per annum simple interest. He immediately lends it to another person at 4% per annum for 3 years. Find his gain in the transaction per year.

- Ans**
- 1. ₹240
 - 2. ₹360
 - 3. ₹720
 - 4. ₹630

Question ID : 264330118509

Option 1 ID : 264330465439

Option 2 ID : 264330465438

Option 3 ID : 264330465437

Option 4 ID : 264330465440

Status : Answered

Chosen Option : 1

Q.1 In MS Word 365, which of the following commands allows the user to preview the document before printing it on paper?

- Ans
- 1. Print
 - 2. View
 - 3. Layout Print Layout
 - 4. Print Preview

Question ID : 264330179158
Option 1 ID : 264330702635
Option 2 ID : 264330702636
Option 3 ID : 264330702638
Option 4 ID : 264330702637
Status : Answered
Chosen Option : 4

Q.2 Which of the following can be done by using the Spelling and Grammar tool in MS Word 365?

- A. Indicate grammatical errors
- B. Correct spelling errors as you type
- C. Identify words with capitalisation problems

- Ans
- 1. A and C only
 - 2. A and B only
 - 3. B and C only
 - 4. A, B and C

Question ID : 264330180634
Option 1 ID : 264330708505
Option 2 ID : 264330708503
Option 3 ID : 264330708504
Option 4 ID : 264330708506
Status : Answered
Chosen Option : 2

Q.3 Which of the following is the shortcut key to Cut text in MS Word 365?

- Ans
- 1. Shift+X
 - 2. Ctrl+C
 - 3. Ctrl+X
 - 4. Ctrl+Shift+X

Question ID : 264330176726
Option 1 ID : 264330693122
Option 2 ID : 264330693119
Option 3 ID : 264330693120
Option 4 ID : 264330693121
Status : Answered
Chosen Option : 3

Q.4 In MS Excel 365, which of the following functions is used to find the smallest value in a range of cells?

- Ans
- 1. AVERAGE
 - 2. MIN
 - 3. SUM
 - 4. COUNT

Question ID : 264330178563
Option 1 ID : 264330700280
Option 2 ID : 264330700282
Option 3 ID : 264330700279
Option 4 ID : 264330700281
Status : Answered
Chosen Option : 2

Q.5 In MS Excel 365, Which of the following is the correct way to save a duplicate MS Excel workbook with the same name as the original workbook, but in a different folder?

- Ans
- 1. Select the desired folder in the 'Save in' field of the 'Save As' dialog box and click on the 'Save' button.
 - 2. Press Ctrl +V
 - 3. Press 'Ctrl + D'
 - 4. Click on the 'Insert' menu and select 'Save'.

Question ID : 264330180601
Option 1 ID : 264330708374
Option 2 ID : 264330708373
Option 3 ID : 264330708372
Option 4 ID : 264330708371
Status : Answered
Chosen Option : 1

Q.6 In MS Excel 365 which of the following keyboard shortcuts is used for saving a workbook in MS Excel 365?

- Ans
- 1. Ctrl + S
 - 2. Shift + S
 - 3. Shift + C
 - 4. Ctrl + V

Question ID : 264330180816
Option 1 ID : 264330709229
Option 2 ID : 264330709230
Option 3 ID : 264330709228
Option 4 ID : 264330709227
Status : Answered
Chosen Option : 1

Q.7 Which of the following is NOT a type of network?

Ans 1. ROR

2. MAN

3. LAN

4. WAN

Question ID : 264330182041

Option 1 ID : 264330714006

Option 2 ID : 264330714004

Option 3 ID : 264330714003

Option 4 ID : 264330714005

Status : Answered

Chosen Option : 1

Q.8 Which option is used to save changes made to an existing document in Microsoft Word 365?

Ans 1. Save

2. Save Changes

3. Save All

4. Save With

Question ID : 264330173592

Option 1 ID : 264330680850

Option 2 ID : 264330680848

Option 3 ID : 264330680849

Option 4 ID : 264330680847

Status : Answered

Chosen Option : 2

Q.9 Which of the following components is typically included in the header of an email?

Ans 1. Body text

2. Subject line

3. Salutation

4. Signature

Question ID : 264330174460

Option 1 ID : 264330684262

Option 2 ID : 264330684259

Option 3 ID : 264330684261

Option 4 ID : 264330684260

Status : Answered

Chosen Option : 2

Q.10 Which of the following terms is used to describe the space between the edge of the paper and the text in MS word 365?

Ans 1. Orientation

2. Columns

3. Size

4. Margins

Question ID : 264330176711

Option 1 ID : 264330693060

Option 2 ID : 264330693062

Option 3 ID : 264330693059

Option 4 ID : 264330693061

Status : Answered

Chosen Option : 4

Constable Executive Male and Female in Delhi Police Examination 2023

Roll Number	
Candidate Name	
Venue Name	Gyanada Institute Of Computer Training
Exam Date	23/11/2023
Exam Time	12:00 PM - 1:30 PM
Subject	Constable Executive Male and Female in Delhi Police Examination 2023

Section : **General Knowledge**

Q.1 In which of the following cities of British India was the Communist Party of India founded, in 1925?

- Ans
- 1. Calcutta
 - 2. Lucknow
 - 3. Kanpur
 - 4. Delhi

Question ID : 264330117808
Option 1 ID : 264330463047
Option 2 ID : 264330463049
Option 3 ID : 264330463048
Option 4 ID : 264330463050
Status : **Not Answered**
Chosen Option : --

Q.2 Who among the following won the '67th Filmfare Award 2022 for Best Choreography' for the film Atrangi Re?

- Ans
- 1. Remo D' Souza
 - 2. Vijay Ganguly
 - 3. Farah Khan
 - 4. Prabhu Deva

Question ID : 264330130524
Option 1 ID : 264330511207
Option 2 ID : 264330511209
Option 3 ID : 264330511208
Option 4 ID : 264330511210
Status : **Not Answered**
Chosen Option : --

Q.3 During the census 2011, which of the following states recorded the lowest growth rate?

- Ans
- 1. Nagaland
 - 2. Sikkim
 - 3. Uttar Pradesh
 - 4. Madhya Pradesh

Question ID : 264330179548
Option 1 ID : 264330704194
Option 2 ID : 264330704193
Option 3 ID : 264330704191
Option 4 ID : 264330704192
Status : **Answered**
Chosen Option : 1

Q.4 Which of the following statements is correct with regard to the effect of globalisation on India and other developing countries?

- Ans
- 1. Flow of information became highly restricted.
 - 2. It led to increased inequality between countries.
 - 3. Flow of international capital got restricted.
 - 4. It reduced interdependence between countries.

Question ID : 264330111773
Option 1 ID : 264330439179
Option 2 ID : 264330439178
Option 3 ID : 264330439180
Option 4 ID : 264330439177
Status : Not Answered
Chosen Option : --

Q.5 According to the Planning Commission of India (2011-12), which state has the highest percentage of the population below the poverty line?

- Ans
- 1. Chhattisgarh
 - 2. Assam
 - 3. Madhya Pradesh
 - 4. Bihar

Question ID : 264330119920
Option 1 ID : 264330469956
Option 2 ID : 264330469958
Option 3 ID : 264330469957
Option 4 ID : 264330469955
Status : Answered
Chosen Option : 4

Q.6 Guru Amubi Singh won the Sangeet Natak Akademi Award for which form of dance?

- Ans
- 1. Manipuri
 - 2. Bihu
 - 3. Odissi
 - 4. Kathakali

Question ID : 26433074876
Option 1 ID : 264330293595
Option 2 ID : 264330293593
Option 3 ID : 264330293594
Option 4 ID : 264330293592
Status : Answered
Chosen Option : 1

Q.7 The Teliya Dam is located in which state of India?

- Ans
- 1. Andhra Pradesh
 - 2. Jharkhand
 - 3. Karnataka
 - 4. Rajasthan

Question ID : 264330178704
Option 1 ID : 264330700845
Option 2 ID : 264330700843
Option 3 ID : 264330700846
Option 4 ID : 264330700844
Status : Answered
Chosen Option : 1

Q.8 Who inaugurated the 44th Chess Olympiad, which was organised in 2022?

- Ans
- 1. MK Stalin
 - 2. Anurag Thakur
 - 3. Viswanathan Anand
 - 4. Narendra Modi

Question ID : 264330113738
Option 1 ID : 264330447038
Option 2 ID : 264330447037
Option 3 ID : 264330447040
Option 4 ID : 264330447039
Status : Answered
Chosen Option : 1

Q.9 Who among the following dancers and choreographers is credited to bring fusion art into a dance where European style is mixed with Indian Classical Dance?

- Ans
- 1. Uday Shankar
 - 2. Kelucharan Mohapatra
 - 3. Rukmini Devi Arundale
 - 4. Birju Maharaj

Question ID : 264330112875
Option 1 ID : 264330443587
Option 2 ID : 264330443585
Option 3 ID : 264330443588
Option 4 ID : 264330443586
Status : Not Answered
Chosen Option : --

Q.10 Which scheme was rolled out to effectively integrate India's manufacturing capabilities with the demands of global supply chains and to promote domestic value addition and exports?

- Ans
- 1. Startup India
 - 2. Merchandise Exports from India Scheme
 - 3. Make in India initiative
 - 4. Production Linked Incentive Scheme

Question ID : 264330111581
Option 1 ID : 264330438412
Option 2 ID : 264330438409
Option 3 ID : 264330438410
Option 4 ID : 264330438411
Status : Not Answered
Chosen Option : --

Q.11 What is the name of the autobiography written by the 14th Dalai Lama?

- Ans
- 1. My Country My Life
 - 2. Living with the Himalayan Masters
 - 3. Freedom in Exile
 - 4. Long Walk to Freedom

Question ID : 26433071508
Option 1 ID : 264330280458
Option 2 ID : 264330280459
Option 3 ID : 264330280456
Option 4 ID : 264330280457
Status : Answered
Chosen Option : 3

Q.12 From which country did India import wheat seeds during the Green Revolution?

- Ans
- 1. USA
 - 2. Russia
 - 3. Britain
 - 4. Mexico

Question ID : 264330120216
Option 1 ID : 264330471120
Option 2 ID : 264330471121
Option 3 ID : 264330471122
Option 4 ID : 264330471119
Status : Not Answered
Chosen Option : --

Q.13 Ayushman Bharat Programme is an umbrella of _____ scheme launched in 2018.

- Ans
- 1. employment
 - 2. education
 - 3. health
 - 4. livelihood

Question ID : 264330110012
Option 1 ID : 264330432326
Option 2 ID : 264330432325
Option 3 ID : 264330432327
Option 4 ID : 264330432328
Status : Answered
Chosen Option : 3

Q.14 Which of the following is NOT a type of budget of the Government?

- Ans
- 1. Surplus budget
 - 2. Deficit budget
 - 3. Circle budget
 - 4. Balanced budget

Question ID : 264330112446
Option 1 ID : 264330441871
Option 2 ID : 264330441872
Option 3 ID : 264330441870
Option 4 ID : 264330441869
Status : Not Answered
Chosen Option : --

Q.15 Stainless steel cookware contains _____.

- Ans
- 1. chromium
 - 2. magnesium
 - 3. calcium
 - 4. manganese

Question ID : 264330117617
Option 1 ID : 264330462493
Option 2 ID : 264330462494
Option 3 ID : 264330462496
Option 4 ID : 264330462495
Status : Answered
Chosen Option : 4

Q.16 Which of the following Articles of the Indian Constitution deals with the District Planning Committee?

- Ans
- 1. 243-XD
 - 2. 243-ZD
 - 3. 243-YD
 - 4. 243- WD

Question ID : 264330120192
Option 1 ID : 264330471025
Option 2 ID : 264330471023
Option 3 ID : 264330471024
Option 4 ID : 264330471026
Status : Not Answered
Chosen Option : --

Q.17 'Vrittayata' is a major sub-division of _____ style of temple architecture.

- Ans
- 1. Hoysala
 - 2. Nagara
 - 3. Dravidian
 - 4. Vijayanagara

Question ID : 26433086648
Option 1 ID : 264330340235
Option 2 ID : 264330340236
Option 3 ID : 264330340233
Option 4 ID : 264330340234
Status : Answered
Chosen Option : 3

Q.18 Which of the following statements about plastids is INCORRECT?

- Ans
- 1. Leucoplasts are primarily organelles in which materials such as starch, oils and protein granules are stored.
 - 2. Leucoplasts are white or colourless plastids.
 - 3. Plastids do not have their own DNA and ribosomes.
 - 4. Chromoplasts are responsible for photosynthesis in plants.

Question ID : 264330177329
Option 1 ID : 264330695508
Option 2 ID : 264330695507
Option 3 ID : 264330695509
Option 4 ID : 264330695510
Status : Answered
Chosen Option : 3

Q.19 Which of the following dances means 'dance of the enchantress'?

- Ans
- 1. Kathak
 - 2. Sattriya
 - 3. Kuchipudi
 - 4. Mohiniyattam

Question ID : 264330110405
Option 1 ID : 264330433900
Option 2 ID : 264330433897
Option 3 ID : 264330433898
Option 4 ID : 264330433899
Status : Not Answered
Chosen Option : --

Q.20 'Faster, More Inclusive and Sustainable Growth' was the centre point of which Five-Year Plan?

- Ans
- 1. Tenth
 - 2. Twelfth
 - 3. Ninth
 - 4. Seventh

Question ID : 264330109386
Option 1 ID : 264330429823
Option 2 ID : 264330429824
Option 3 ID : 264330429822
Option 4 ID : 264330429821
Status : Answered
Chosen Option : 2

Q.21 The Constitution (42nd Amendment) Act, 1976, Chapter IV-A introduced a code of ten _____ for citizens.

- Ans
- 1. Fundamental Rights
 - 2. Fundamental Duties
 - 3. Fundamental Principles
 - 4. Directive Principles

Question ID : 264330110774
Option 1 ID : 264330435374
Option 2 ID : 264330435373
Option 3 ID : 264330435376
Option 4 ID : 264330435375
Status : Answered
Chosen Option : 2

Q.22 Which of the following is NOT a national festival?

- Ans
- 1. Diwali
 - 2. Gandhi Jayanti
 - 3. Republic Day
 - 4. Independence Day

Question ID : 264330106213
Option 1 ID : 264330417155
Option 2 ID : 264330417153
Option 3 ID : 264330417154
Option 4 ID : 264330417156
Status : Not Answered
Chosen Option : --

Q.23 What does LPG cooking gas contain?

- Ans
- 1. Methane and ethylene
 - 2. Propane and ethane
 - 3. Propane and butane
 - 4. Methane and propane

Question ID : 264330120974
Option 1 ID : 264330474111
Option 2 ID : 264330474114
Option 3 ID : 264330474113
Option 4 ID : 264330474112
Status : Answered
Chosen Option : 3

Q.24 Under which Constitutional Amendment Act were the Fundamental Duties first added to the Indian Constitution?

- Ans
- 1. 40th Constitutional Amendment Act
 - 2. 43rd Constitutional Amendment Act
 - 3. 41st Constitutional Amendment Act
 - 4. 42nd Constitutional Amendment Act

Question ID : 264330114483
Option 1 ID : 264330450017
Option 2 ID : 264330450020
Option 3 ID : 264330450018
Option 4 ID : 264330450019
Status : Answered
Chosen Option : 4

Q.25 _____ delegates from all over the country congregated for the first session of the Indian National Congress at Bombay in December 1885.

- Ans
- 1. 105
 - 2. 72
 - 3. 51
 - 4. 179

Question ID : 264330114109
Option 1 ID : 264330448521
Option 2 ID : 264330448522
Option 3 ID : 264330448523
Option 4 ID : 264330448524
Status : Answered
Chosen Option : 2

Q.26 Purushottam Dadheech is a famous and recognised Indian _____ dancer.

- Ans
- 1. Kathak
 - 2. Kuchipudi
 - 3. Sattriya
 - 4. Kathakali

Question ID : 264330110247
Option 1 ID : 264330433266
Option 2 ID : 264330433267
Option 3 ID : 264330433268
Option 4 ID : 264330433265
Status : Not Answered
Chosen Option : --

Q.27 Which directive principle provides for a uniform civil code for citizens?

- Ans
- 1. Article 44
 - 2. Article 41
 - 3. Article 42
 - 4. Article 43

Question ID : 264330120101
Option 1 ID : 264330470662
Option 2 ID : 264330470659
Option 3 ID : 264330470660
Option 4 ID : 264330470661
Status : Answered
Chosen Option : 3

Q.28 According to the Köppen classification, which group of climate is generally found at higher latitudes or higher altitudes?

- Ans
- 1. D group
 - 2. E group
 - 3. C group
 - 4. A group

Question ID : 264330141727
Option 1 ID : 264330555229
Option 2 ID : 264330555228
Option 3 ID : 264330555230
Option 4 ID : 264330555227
Status : Answered
Chosen Option : 2

Q.29 The final event in decathlon is always:

- Ans
- 1. 110 m hurdle
 - 2. 1500 m race
 - 3. javelin throw
 - 4. 800 m race

Question ID : 264330110393
Option 1 ID : 264330433851
Option 2 ID : 264330433852
Option 3 ID : 264330433849
Option 4 ID : 264330433850
Status : Not Answered
Chosen Option : --

Q.30 Which State has the maximum number of members in Rajya Sabha?

- Ans
- 1. Haryana
 - 2. Bihar
 - 3. Uttar Pradesh
 - 4. Punjab

Question ID : 264330173530
Option 1 ID : 264330680601
Option 2 ID : 264330680602
Option 3 ID : 264330680599
Option 4 ID : 264330680600
Status : Answered
Chosen Option : 3

Q.31 Which of the following Acts was passed by Governor General Lord William Bentinck in 1829?

- Ans
- 1. Indian Telegraph Act
 - 2. Bengal Sati Regulation Act
 - 3. Indian Slavery Act
 - 4. Criminal Tribes Act

Question ID : 264330183130
Option 1 ID : 264330718255
Option 2 ID : 264330718253
Option 3 ID : 264330718252
Option 4 ID : 264330718254
Status : Answered
Chosen Option : 2

Q.32 Identify the Headquarters of the East Coast Railway Zone of India?

Ans 1. Bhubaneswar

2. Kolkata

3. New Delhi

4. Mumbai

Question ID : 264330138061

Option 1 ID : 264330540854

Option 2 ID : 264330540852

Option 3 ID : 264330540851

Option 4 ID : 264330540853

Status : Answered

Chosen Option : 1

Q.33 In which of the following Articles of the Constitution of India, is it mentioned that "it shall be the duty of every citizen of India to value and preserve the rich heritage of our composite culture"?

Ans 1. 51A (f)

2. 51A (b)

3. 51A (h)

4. 51A (m)

Question ID : 264330133056

Option 1 ID : 264330521276

Option 2 ID : 264330521275

Option 3 ID : 264330521277

Option 4 ID : 264330521278

Status : Answered

Chosen Option : 3

Q.34 When is National Unity Day observed?

Ans 1. 31 November

2. 8 November

3. 31 October

4. 11 March

Question ID : 264330118630

Option 1 ID : 264330465772

Option 2 ID : 264330465773

Option 3 ID : 264330465774

Option 4 ID : 264330465771

Status : Answered

Chosen Option : 3

Q.35 Who among the following is credited for laying the foundation of microfinance institutions?

Ans 1. Amartya Sen

2. Jagdish Bhagwati

3. PV Narasimha Rao

4. Muhammad Yunus

Question ID : 264330116498

Option 1 ID : 264330458079

Option 2 ID : 264330458080

Option 3 ID : 264330458077

Option 4 ID : 264330458078

Status : Not Answered

Chosen Option : --

Q.36 Who among the following defeated Mughal emperor Humayun in the Battle of Kannauj in 1540?

- Ans
- 1. Bahadur Shah
 - 2. Islam Shah
 - 3. Tatar Khan
 - 4. Sher Shah Suri

Question ID : 264330113573
Option 1 ID : 264330446379
Option 2 ID : 264330446377
Option 3 ID : 264330446380
Option 4 ID : 264330446378
Status : Answered
Chosen Option : 4

Q.37 In which state is the Kanha National Park located?

- Ans
- 1. Bihar
 - 2. Himachal Pradesh
 - 3. Madhya Pradesh
 - 4. Karnataka

Question ID : 264330173627
Option 1 ID : 264330680988
Option 2 ID : 264330680987
Option 3 ID : 264330680989
Option 4 ID : 264330680990
Status : Answered
Chosen Option : 3

Q.38 Identify the first Gurjara Partihara ruler who successfully defeated the Arab invaders.

- Ans
- 1. Nagabhata I
 - 2. Vatsaraja
 - 3. Mahendrapala I
 - 4. Mahipala

Question ID : 264330182258
Option 1 ID : 264330714856
Option 2 ID : 264330714855
Option 3 ID : 264330714858
Option 4 ID : 264330714857
Status : Answered
Chosen Option : 1

Q.39 Ustad Amjad Ali Khan is the maestro in playing the _____.

- Ans
- 1. sitar
 - 2. sarod
 - 3. bansuri
 - 4. tabla

Question ID : 264330116423
Option 1 ID : 264330457777
Option 2 ID : 264330457779
Option 3 ID : 264330457780
Option 4 ID : 264330457778
Status : Answered
Chosen Option : 2

Q.40 Which neighbouring country of India was the eighth most populous country in the world, as per the US Census Bureau, by July 2022?

- Ans
- 1. Nepal
 - 2. Bangladesh
 - 3. Bhutan
 - 4. Myanmar

Question ID : 264330120383
Option 1 ID : 264330471784
Option 2 ID : 264330471786
Option 3 ID : 264330471785
Option 4 ID : 264330471783
Status : Answered
Chosen Option : 2

Q.41 Who became India's first weightlifter to win a gold medal at the IWF Junior World Championships, in 2022?

- Ans
- 1. Harshada Sharad Garud
 - 2. T Madhavan
 - 3. Anjali Patel
 - 4. Muna Nayak

Question ID : 264330113743
Option 1 ID : 264330447057
Option 2 ID : 264330447059
Option 3 ID : 264330447060
Option 4 ID : 264330447058
Status : Not Answered
Chosen Option : --

Q.42 Which of the following is the first published novel of the famous author Salman Rushdie?

- Ans
- 1. Grimus
 - 2. The Moor's Last Sigh
 - 3. The Satanic Verses
 - 4. Shame

Question ID : 264330112867
Option 1 ID : 264330443556
Option 2 ID : 264330443555
Option 3 ID : 264330443553
Option 4 ID : 264330443554
Status : Not Answered
Chosen Option : --

Q.43 Minister of state can attend the cabinet meeting _____.

- Ans
- 1. on his own will
 - 2. only when the speaker invites him
 - 3. only when invited
 - 4. because its compulsory for him

Question ID : 26433089967
Option 1 ID : 264330353345
Option 2 ID : 264330353348
Option 3 ID : 264330353346
Option 4 ID : 264330353347
Status : Answered
Chosen Option : 3

Q.44 In which of the following places were the remains of Mahaparinirvana Buddha found? It is at this location that a 6.1 m long reclining Buddha has been constructed.

- Ans
- 1. Vaishali
 - 2. Bodhgaya
 - 3. Kushinagar
 - 4. Vethipada

Question ID : 264330113552
Option 1 ID : 264330446296
Option 2 ID : 264330446294
Option 3 ID : 264330446293
Option 4 ID : 264330446295
Status : Answered
Chosen Option : 3

Q.45 The term 'checkmate' is used in _____.

- Ans
- 1. Badminton
 - 2. Golf
 - 3. Chess
 - 4. Tennis

Question ID : 264330134273
Option 1 ID : 264330526088
Option 2 ID : 264330526090
Option 3 ID : 264330526087
Option 4 ID : 264330526089
Status : Answered
Chosen Option : 3

Q.46 Which king of the Mauryan dynasty succeeded Chandragupta Maurya?

- Ans
- 1. Brihadratha
 - 2. Samprati
 - 3. Ashoka
 - 4. Bindusara

Question ID : 264330183230
Option 1 ID : 264330718654
Option 2 ID : 264330718655
Option 3 ID : 264330718653
Option 4 ID : 264330718652
Status : Answered
Chosen Option : 3

Q.47 The famous Chinese Buddhist pilgrim, Fa Hein visited India during the reign of which of the following Gupta rulers?

- Ans
- 1. Sri Gupta
 - 2. Samudragupta
 - 3. Kumargupta
 - 4. Chandragupta II

Question ID : 264330114813
Option 1 ID : 264330451339
Option 2 ID : 264330451337
Option 3 ID : 264330451340
Option 4 ID : 264330451338
Status : Answered
Chosen Option : 4

Q.48 Who coined the name 'Pakistan'?

- Ans 1. Aga Khan
 2. Chaudhry Rehmat Ali
 3. Md Iqbal
 4. Md Ali Jinnah

Question ID : 264330119000
Option 1 ID : 264330466656
Option 2 ID : 264330466658
Option 3 ID : 264330466657
Option 4 ID : 264330466655
Status : Answered
Chosen Option : 3

Q.49 As per Köppen climate classification, the climate of which place is classified as 'Cwg' (meso thermal with dry winters)?

- Ans 1. North-western Gujarat
 2. Extreme western Rajasthan
 3. South of Goa
 4. Gangetic plains

Question ID : 264330114160
Option 1 ID : 264330448728
Option 2 ID : 264330448725
Option 3 ID : 264330448726
Option 4 ID : 264330448727
Status : Not Answered
Chosen Option : --

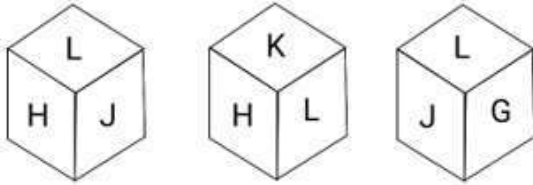
Q.50 In order to preserve pickles, a mixture of 5% to 8% of acetic acid in water is used. This preservative is also commonly known as:

- Ans 1. oil
 2. salt
 3. vinegar
 4. lemon juice

Question ID : 264330177017
Option 1 ID : 264330694265
Option 2 ID : 264330694264
Option 3 ID : 264330694263
Option 4 ID : 264330694266
Status : Answered
Chosen Option : 3

Section : Reasoning

Q.1 Six letters, G, H, I, J, K and L are written on different faces of a dice. Three positions of this dice are shown here. Find the letter on the face opposite L.



- Ans
- 1. J
 - 2. I
 - 3. H
 - 4. G

Question ID : 264330106396

Option 1 ID : 264330417885

Option 2 ID : 264330417886

Option 3 ID : 264330417888

Option 4 ID : 264330417887

Status : Answered

Chosen Option : 2

Q.2 Which of the following option figures will complete the pattern in the figure given below?



Ans

- 1.
- 2.
- 3.
- 4.

Question ID : 26433089627

Option 1 ID : 264330352010

Option 2 ID : 264330352009

Option 3 ID : 264330352011

Option 4 ID : 264330352012

Status : Answered

Chosen Option : 3

Q.3 Select the set in which the numbers are related in the same way as are the numbers of the following sets.

(NOTE : Operations should be performed on the whole numbers, without breaking down the numbers into its constituent digits. E.g. 13 – Operations on 13 such as adding /deleting /multiplying etc. to 13 can be performed. Breaking down 13 into 1 and 3 and then performing mathematical operations on 1 and 3 is NOT allowed)
(50, 63), (101, 120)

Ans 1. (226, 253)

2. (145, 168)

3. (402, 440)

4. (169, 196)

Question ID : 26433052043

Option 1 ID : 264330203474

Option 2 ID : 264330203475

Option 3 ID : 264330203476

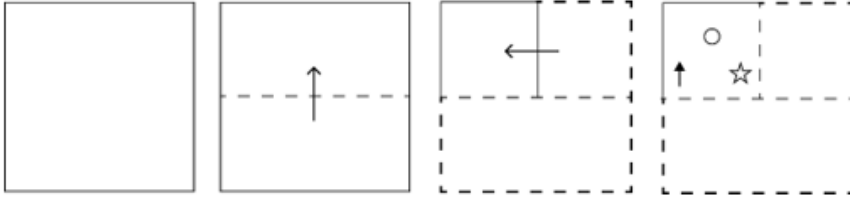
Option 4 ID : 264330203477

Status : Answered

Chosen Option : 2

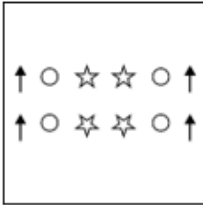


Q.4 A square sheet of paper is folded along the dotted line successively along the directions shown and is then punched in the last. How would the paper look when unfolded?

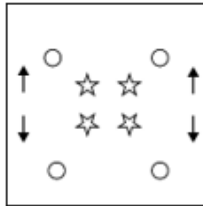


Ans

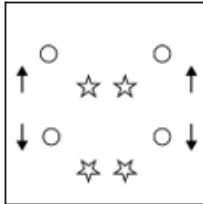
1.



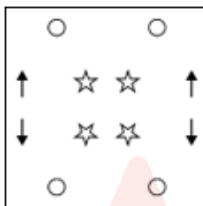
2.



3.



4.



Question ID : 264330172422

Option 1 ID : 264330676241

Option 2 ID : 264330676240

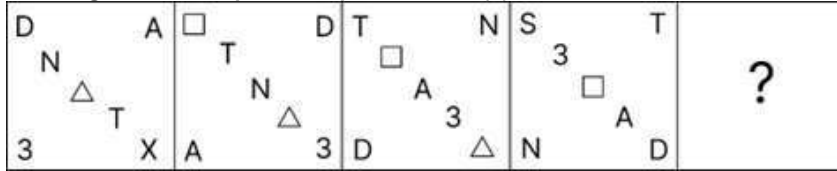
Option 3 ID : 264330676242

Option 4 ID : 264330676239

Status : Answered

Chosen Option : 2

Q.5 Which figure should replace the question mark (?) if the series were to be continued?



Ans

- ✗ 1.
- ✗ 2.
- ✗ 3.
- ✓ 4.

Question ID : 264330130800

Option 1 ID : 264330512313

Option 2 ID : 264330512314

Option 3 ID : 264330512311

Option 4 ID : 264330512312

Status : Answered

Chosen Option : 4

Q.6 In a certain code language, if NOVEL is coded as 67 and HISTORY is coded as 75, then how will SCIENCE be coded?

- ✗ 1. 120
- ✓ 2. 131
- ✗ 3. 130
- ✗ 4. 126

Question ID : 26433097449

Option 1 ID : 264330382485

Option 2 ID : 264330382488

Option 3 ID : 264330382487

Option 4 ID : 264330382486

Status : Answered

Chosen Option : 2

Q.7 Select the correct combination of mathematical signs that can sequentially replace the * signs and balance the given expression.

$$73 * 12 * 5 * 2 * 39 * 64$$

- Ans
- 1. +, +, x, -, =
 - 2. x, +, -, +, =
 - 3. +, x, +, -, =
 - 4. +, -, x, +, =

Question ID : 26433074782

Option 1 ID : 264330293216

Option 2 ID : 264330293217

Option 3 ID : 264330293218

Option 4 ID : 264330293219

Status : Answered

Chosen Option : 3

Q.8 Select the option that is related to the third term in the same way as the second term is related to the first term and the sixth term is related to the fifth term.
9 : 729 :: 11 : ? :: 4 : 64

- Ans
- 1. 99
 - 2. 1331
 - 3. 121
 - 4. 1342

Question ID : 264330101041

Option 1 ID : 264330396710

Option 2 ID : 264330396711

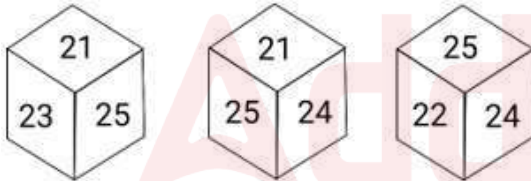
Option 3 ID : 264330396709

Option 4 ID : 264330396712

Status : Answered

Chosen Option : 2

Q.9 Six numbers, 21, 22, 23, 24, 25 and 26 are written on different faces of a dice. Three positions of this dice are shown here. Find the number on the face opposite 25.



- Ans
- 1. 24
 - 2. 21
 - 3. 26
 - 4. 22

Question ID : 264330106411

Option 1 ID : 264330417947

Option 2 ID : 264330417945

Option 3 ID : 264330417948

Option 4 ID : 264330417946

Status : Answered

Chosen Option : 3

Q.10 Select the option that represents the letters that, when sequentially placed from left to right in the blanks below, will complete the letter series.

S _ _ A D _ Q W _ D _ Q W A _ S Q _ _ D

- Ans
- 1. QWSASAWD
 - 2. QWSASDWA
 - 3. QWSAADWA
 - 4. QWSASDQA

Question ID : 26433092539

Option 1 ID : 264330363447

Option 2 ID : 264330363445

Option 3 ID : 264330363446

Option 4 ID : 264330363448

Status : Answered

Chosen Option : 2

Q.11 Select the correct mirror image of the given figure when the mirror is placed at PQ as shown below.

B\$#@wer#sd4

P
|
Q

- Ans
- 1. B\$#@wer#sd4
 - 2. B\$#@er#sd4
 - 3. B\$#@wer#sd4
 - 4. B\$#@wer#sd4

Question ID : 26433082033

Option 1 ID : 264330321966

Option 2 ID : 264330321967

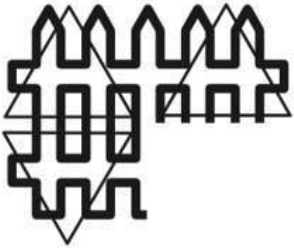
Option 3 ID : 264330321965

Option 4 ID : 264330321968

Status : Answered

Chosen Option : 3

Q.12 Which of the following option figures will complete the pattern in the figure given below?



Ans

✓ 1.



✗ 2.



✗ 3.



✗ 4.



Question ID : 26433080639

Option 1 ID : 264330316490

Option 2 ID : 264330316489

Option 3 ID : 264330316492

Option 4 ID : 264330316491

Status : Answered

Chosen Option : 1

Q.13 Select the figure that will replace the question mark (?) in the following figure series.



Ans



Question ID : 264330108956

Option 1 ID : 264330428102

Option 2 ID : 264330428103

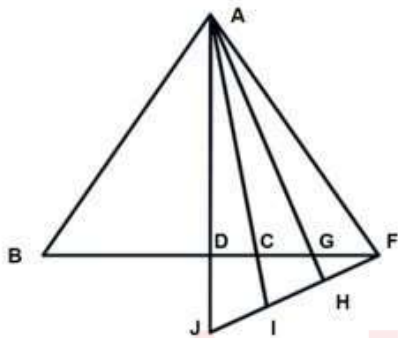
Option 3 ID : 264330428104

Option 4 ID : 264330428101

Status : Answered

Chosen Option : 1

Q.14 How many triangles are there in the given figure?



Ans ✗ 1. 15

✓ 2. 19

✗ 3. 22

✗ 4. 17

Question ID : 26433080668

Option 1 ID : 264330316605

Option 2 ID : 264330316607

Option 3 ID : 264330316608

Option 4 ID : 264330316606

Status : Answered

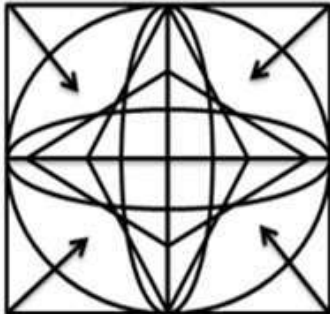
Chosen Option : 2

Q.15 Select the correct combination of mathematical signs to sequentially replace the * signs and to balance the given equation.
 $225 * 15 * 10 * 50 * 25 * 125$

- Ans
- 1. +, x, -, +, =
 - 2. +, x, +, -, =
 - 3. +, +, -, x, =
 - 4. ÷, x, -, +, =

Question ID : 26433076552
 Option 1 ID : 264330300272
 Option 2 ID : 264330300275
 Option 3 ID : 264330300273
 Option 4 ID : 264330300274
 Status : Answered
 Chosen Option : 4

Q.16 Select the option figure that is embedded in the given figure. (Rotation is not allowed)



Ans

- 1.
- 2.
- 3.
- 4.

Question ID : 264330114405
 Option 1 ID : 264330449706
 Option 2 ID : 264330449708
 Option 3 ID : 264330449707
 Option 4 ID : 264330449705
 Status : Answered
 Chosen Option : 1

Q.17 Select the correct mirror image of the given combination when the mirror is placed at MN as shown below.

R d 9 K p 6 w



Ans

- 1. w ə q k e b Я
- 2. w ə q k 6 p Я
- 3. Я b e k q ə W
- 4. Я q ə k b e w

Question ID : 264330116998

Option 1 ID : 264330460073

Option 2 ID : 264330460076

Option 3 ID : 264330460075

Option 4 ID : 264330460074

Status : Answered

Chosen Option : 1

Q.18 Two statements are given, followed by three conclusions numbered I, II and III. Assuming the statements to be true, even if they seem to be at variance with commonly known facts, decide which of the conclusions logically follow(s) from the statements.

Statements:

All chips are snacks.

Some fried foods are chips.

Conclusions:

I. All fried foods are snacks.

II. Some snacks are fried foods.

III. No fried food is snack.

Ans

- 1. Only conclusion II follows
- 2. Only conclusion III follows
- 3. Only conclusions II and III follow
- 4. Either conclusion I or III follows

Question ID : 26433068826

Option 1 ID : 264330269819

Option 2 ID : 264330269818

Option 3 ID : 264330269817

Option 4 ID : 264330269816

Status : Answered

Chosen Option : 1

Q.19 Select the option that is related to the fifth letter-cluster in the same way as the second letter-cluster is related to the first letter-cluster and the fourth letter-cluster is related to the third letter-cluster.

GAIN : PKCI :: KEYS : UAGM :: ACHE : _____

- Ans
- 1. EJCE
 - 2. ECHA
 - 3. BDIF
 - 4. GJEC

Question ID : 26433074586

Option 1 ID : 264330292432

Option 2 ID : 264330292435

Option 3 ID : 264330292434

Option 4 ID : 264330292433

Status : Answered

Chosen Option : 4

Q.20 Select the option figure that will replace the question mark (?) in the figure given below to complete the pattern.



Ans

- 1.
- 2.
- 3.
- 4.

Question ID : 26433089464

Option 1 ID : 264330351357

Option 2 ID : 264330351359

Option 3 ID : 264330351358

Option 4 ID : 264330351360

Status : Answered

Chosen Option : 4

Q.21 Select the number from among the given options that can replace the question mark (?) in the following series.

10, 15, 30, 75, 210, ?

- Ans
- 1. 600
 - 2. 567
 - 3. 435
 - 4. 615

Question ID : 264330109763

Option 1 ID : 264330431329

Option 2 ID : 264330431332

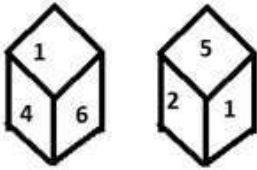
Option 3 ID : 264330431331

Option 4 ID : 264330431330

Status : Answered

Chosen Option : 4

Q.22 Six numbers 1, 2, 3, 4, 5 and 6 are written on different faces of a dice. Two positions of this dice are shown in the figure. Find the number on the face opposite to 2.



- Ans
- 1. 5
 - 2. 3
 - 3. 4
 - 4. 6

Question ID : 264330117905

Option 1 ID : 264330463438

Option 2 ID : 264330463435

Option 3 ID : 264330463437

Option 4 ID : 264330463436

Status : Answered

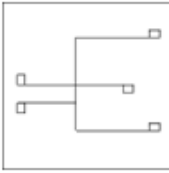
Chosen Option : 4

Q.23 Select the option in which the given figure is embedded (rotation is NOT allowed).

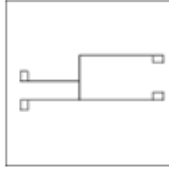


Ans

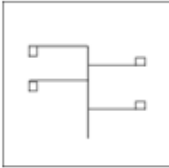
1.



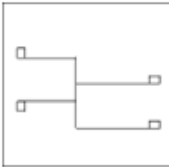
2.



3.



4.



Question ID : 264330117866

Option 1 ID : 264330463281

Option 2 ID : 264330463279

Option 3 ID : 264330463282

Option 4 ID : 264330463280

Status : Answered

Chosen Option : 2

Q.24 Five people A, B, C, D and E are sitting in a straight row, facing north. Only two people are seated to the left of C. D is sitting at the extreme right end. B is not an immediate neighbour of D, and is second to the left of A. Where is B sitting?

Ans

1. To the immediate right of E

2. To the immediate right of C

3. Fourth to the left of D

4. Third to the left of A

Question ID : 26433091434

Option 1 ID : 264330359102

Option 2 ID : 264330359101

Option 3 ID : 264330359103

Option 4 ID : 264330359104

Status : Answered

Chosen Option : 1

Q.25 Which figure should replace the question mark (?) if the following series were to be continued?

☆	=	B	△	☆	F	=	△	☆	B		?				
O	F	△	☆	=	Z	O	B	△	☆	F		Z	O	=	△
B		Z	O		F	=	Z	O	B	F		Z			

Ans

✓ 1.

F		△
☆	B	Z
O		=

✗ 2.

F		=
☆	Z	B
O		△

✗ 3.

F		Z
☆	=	B
O		△

✗ 4.

O		Z
F	☆	B
=		△

Question ID : 264330103884

Option 1 ID : 264330407837

Option 2 ID : 264330407838

Option 3 ID : 264330407840

Option 4 ID : 264330407839

Status : Answered

Chosen Option : 1

Section : Numerical Ability

Q.1 What is the area (in cm²) of a parallelogram whose base length and height are 4 cm and 5 cm, respectively?

Ans ✗ 1. 18

✗ 2. 15

✓ 3. 20

✗ 4. 10

Question ID : 264330112236

Option 1 ID : 264330441032

Option 2 ID : 264330441029

Option 3 ID : 264330441030

Option 4 ID : 264330441031

Status : Answered

Chosen Option : 3

Q.2 Sushil's income is 22% less than Abhishek's income. Abhishek's income is what % more than Sushil's income?

- Ans
- 1. 27.8%
 - 2. 28.20%
 - 3. 30.8%
 - 4. 25.8%

Question ID : 264330131827
Option 1 ID : 264330516409
Option 2 ID : 264330516407
Option 3 ID : 264330516408
Option 4 ID : 264330516410
Status : Answered
Chosen Option : 2

Q.3 Find the difference between the compound interests on ₹2,000 for 1 year at 8% p.a. compounded annually and half-yearly.

- Ans
- 1. ₹2.20
 - 2. ₹3.00
 - 3. ₹3.20
 - 4. ₹2.00

Question ID : 264330103984
Option 1 ID : 264330408240
Option 2 ID : 264330408237
Option 3 ID : 264330408238
Option 4 ID : 264330408239
Status : Answered
Chosen Option : 3

Q.4 The sum of two numbers is 1904 and their HCF 56. The number of such number pairs is:

- Ans
- 1. 3
 - 2. 9
 - 3. 8
 - 4. 4

Question ID : 264330103918
Option 1 ID : 264330407974
Option 2 ID : 264330407976
Option 3 ID : 264330407973
Option 4 ID : 264330407975
Status : Not Attempted and Marked For Review
Chosen Option : --

Q.5 If the radius of a sphere is increased by 3 cm, then its surface area increases by 156π cm^2 . The radius of the sphere before the increase was:

- Ans
- 1. 7 cm
 - 2. 8 cm
 - 3. 6 cm
 - 4. 5 cm

Question ID : 264330119365
Option 1 ID : 264330467748
Option 2 ID : 264330467750
Option 3 ID : 264330467747
Option 4 ID : 264330467749
Status : Answered
Chosen Option : 4

Q.6 A bag contains 4800 g of rice. 20% of rice is added in the bag after which 10% quantity is taken out. Then 15% quantity is added back in the bag. Lastly, 25% of rice is taken out of the bag. What is the weight of the bag now, in grams?

- Ans
- 1. 4471.2
 - 2. 4173.12
 - 3. 4473.2
 - 4. 7452

Question ID : 264330129995
Option 1 ID : 264330509214
Option 2 ID : 264330509212
Option 3 ID : 264330509211
Option 4 ID : 264330509213
Status : Answered
Chosen Option : 1

Q.7 Two erasers cost ₹2 each and are free with one packet of pencils costing ₹15. The discount will be:

- Ans
- 1. $21\frac{1}{19}\%$
 - 2. $26\frac{2}{3}\%$
 - 3. $78\frac{18}{19}\%$
 - 4. $13\frac{1}{3}\%$

Question ID : 264330183852
Option 1 ID : 264330721084
Option 2 ID : 264330721085
Option 3 ID : 264330721086
Option 4 ID : 264330721087
Status : Answered
Chosen Option : 1

Q.8 Rajan covered a total distance of 108 km at an average speed of 12 km/h. He covers $\frac{1}{6}$ of total distance in 2 hours while $\frac{1}{4}$ of the total distance at a speed of 9 km/h. In how much time did he cover the remaining distance?

- Ans
- 1. 2 hours
 - 2. 3 hours
 - 3. 4 hours
 - 4. 5 hours

Question ID : 264330133280
Option 1 ID : 264330522169
Option 2 ID : 264330522167
Option 3 ID : 264330522168
Option 4 ID : 264330522170
Status : Answered
Chosen Option : 3

Q.9 Mr. Sharma deposits his retirement benefit of ₹5 lakhs, partly in a post office and partly in a bank, at 12% and 10% p.a. rate of interest, respectively. If his monthly interest income was ₹4,500, then the difference between the deposit in the post office and in the bank is:

- Ans
- 1. ₹1,50,000
 - 2. ₹1,60,000
 - 3. ₹1,40,000
 - 4. ₹1,00,000

Question ID : 264330118425
Option 1 ID : 264330465103
Option 2 ID : 264330465101
Option 3 ID : 264330465104
Option 4 ID : 264330465102
Status : Answered
Chosen Option : 4

Q.10 Gopi purchased an article at $\frac{7}{8}$ of its selling price. Had he sold it at 20% more than the selling price, then what would his profit percentage be?

- Ans
- 1. 37%
 - 2. 35%
 - 3. $37\frac{1}{7}\%$
 - 4. $35\frac{1}{7}\%$

Question ID : 264330111463
Option 1 ID : 264330437937
Option 2 ID : 264330437939
Option 3 ID : 264330437940
Option 4 ID : 264330437938
Status : Answered
Chosen Option : 3

Q.11 Which of the following numbers is prime?

- Ans 1. 144765
 2. 144723
 3. 144757
 4. 144393

Question ID : 264330104348
Option 1 ID : 264330409695
Option 2 ID : 264330409696
Option 3 ID : 264330409693
Option 4 ID : 264330409694
Status : Answered
Chosen Option : 3

Q.12 A goods train travelling at a constant speed crosses two persons walking in the same direction (as that of the train) in 10.6 seconds and 11 seconds, respectively. The first person was walking at 5.4 km/h, while the second was walking at 6.3 km/h. What was the length of the train (in m)?

- Ans 1. 72.975
 2. 72.875
 3. 72.675
 4. 72.725

Question ID : 264330183821
Option 1 ID : 264330720960
Option 2 ID : 264330720961
Option 3 ID : 264330720962
Option 4 ID : 264330720963
Status : Not Answered
Chosen Option : --

Q.13 If $a : b = 3 : 4$, then the $(5a + 7b) : (7a + 5b)$ is:

- Ans 1. 43 : 31
 2. 31 : 32
 3. 31 : 41
 4. 43 : 41

Question ID : 264330168928
Option 1 ID : 264330662516
Option 2 ID : 264330662515
Option 3 ID : 264330662517
Option 4 ID : 264330662518
Status : Answered
Chosen Option : 4

Q.14 If A can do a piece of work in 16 days and B can do the same work in 24 days, the least whole number of days to complete the work, if they start working on alternate days, is:

- Ans
- 1. 18
 - 2. 19
 - 3. 21
 - 4. 20

Question ID : 264330103569
Option 1 ID : 264330406583
Option 2 ID : 264330406581
Option 3 ID : 264330406584
Option 4 ID : 264330406582
Status : Answered
Chosen Option : 2

Q.15 If $0.2x = 0.04y$, then the value of $\frac{x+y}{y-x}$ is:

- Ans
- 1. $\frac{3}{2}$
 - 2. $\frac{1}{3}$
 - 3. $\frac{2}{3}$
 - 4. $\frac{1}{2}$

Question ID : 264330111438
Option 1 ID : 264330437839
Option 2 ID : 264330437840
Option 3 ID : 264330437837
Option 4 ID : 264330437838
Status : Answered
Chosen Option : 1

Section : Computer Proficiency

Q.1 Which option in Microsoft Excel allows you to create a custom bullet style for a bulleted list?

- Ans
- 1. Format Cells
 - 2. Define New Bullet
 - 3. Styles
 - 4. Text Box

Question ID : 264330173310
Option 1 ID : 264330679720
Option 2 ID : 264330679722
Option 3 ID : 264330679719
Option 4 ID : 264330679721
Status : Answered
Chosen Option : 2

Q.2 Which of the following keyboard shortcuts can be used to paste cut text after moving it?

- Ans
- 1. Ctrl + X
 - 2. Ctrl + P
 - 3. Ctrl + V
 - 4. Ctrl + C

Question ID : 264330180833
Option 1 ID : 264330709297
Option 2 ID : 264330709295
Option 3 ID : 264330709296
Option 4 ID : 264330709298
Status : Answered
Chosen Option : 3

Q.3 What does URL stand for?

- Ans
- 1. Uniform Resource Locator
 - 2. Uniform Resource Location
 - 3. United Resources Locator
 - 4. Uniform Receivers Locator

Question ID : 264330182033
Option 1 ID : 264330713972
Option 2 ID : 264330713974
Option 3 ID : 264330713971
Option 4 ID : 264330713973
Status : Answered
Chosen Option : 1

Q.4 Which tab in Microsoft Word 365 contains the 'Open' option to open an existing document?

- Ans
- 1. File
 - 2. View
 - 3. Home
 - 4. Insert

Question ID : 264330180719
Option 1 ID : 264330708843
Option 2 ID : 264330708846
Option 3 ID : 264330708844
Option 4 ID : 264330708845
Status : Answered
Chosen Option : 1

Q.5 'Contact Us' is present in which of the following sections in MS Word 365?

- Ans
- 1. Help
 - 2. Review
 - 3. Mailings
 - 4. References

Question ID : 264330176729
Option 1 ID : 264330693131
Option 2 ID : 264330693134
Option 3 ID : 264330693133
Option 4 ID : 264330693132
Status : Answered
Chosen Option : 1

Q.6 Which of the following is used to select an entire line or paragraph from the cursor place in MS-Word 365?

- Ans
- 1. Triple mouse click
 - 2. Both single and double mouse click
 - 3. Single mouse click
 - 4. Double mouse click

Question ID : 264330178273
Option 1 ID : 264330699149
Option 2 ID : 264330699150
Option 3 ID : 264330699147
Option 4 ID : 264330699148
Status : Answered
Chosen Option : 1

Q.7 Which of the following signs appears when you drag the fill handle while creating text, number and data series in MS Excel 365?

- Ans
- 1. \$
 - 2. =
 - 3. *
 - 4. +

Question ID : 264330182345
Option 1 ID : 264330715205
Option 2 ID : 264330715206
Option 3 ID : 264330715204
Option 4 ID : 264330715203
Status : Answered
Chosen Option : 1

Q.8 Which of the following is an area where the outgoing messages or messages that are in the process of sending or which failed to send are stored?

- Ans
- 1. Outbox
 - 2. Inbox
 - 3. Trash
 - 4. Sentmail

Question ID : 264330178240
Option 1 ID : 264330699016
Option 2 ID : 264330699015
Option 3 ID : 264330699018
Option 4 ID : 264330699017
Status : Answered
Chosen Option : 1

Q.9 Which of the following is true about sort A to Z in MS-Excel 365?

- Ans
- 1. Sorts the selected column in an descending order
 - 2. Sorts the selected column in an ascending order
 - 3. Sorts data in multiple column by applying different sort criteria
 - 4. Sorts the selected row in an descending order

Question ID : 264330178261
Option 1 ID : 264330699099
Option 2 ID : 264330699100
Option 3 ID : 264330699101
Option 4 ID : 264330699102
Status : Answered
Chosen Option : 2

Q.10 What is the purpose of the 'Track Changes' feature in Microsoft Word 365?

- Ans**
- 1. To highlight spelling and grammar errors in a document.
 - 2. To keep a record of edits made to a document by different authors.
 - 3. To create a backup copy of the document.
 - 4. To automatically save changes made to a document.

Question ID : **264330173587**

Option 1 ID : **264330680828**

Option 2 ID : **264330680829**

Option 3 ID : **264330680830**

Option 4 ID : **264330680827**

Status : **Answered**

Chosen Option : **3**



Constable Executive Male and Female in Delhi Police Examination 2023

Roll Number	
Candidate Name	
Venue Name	iON Digital Zone iDZ Harahuwa Chauraha
Exam Date	23/11/2023
Exam Time	3:00 PM - 4:30 PM
Subject	Constable Executive Male and Female in Delhi Police Examination 2023

Section : General Knowledge

Q.1 Who was known as 'Zinda Pir'?

- Ans 1. Babur
 2. Aurangzeb
 3. Humayun
 4. Akbar

Question ID : 264330123741
Option 1 ID : 264330485000
Option 2 ID : 264330485002
Option 3 ID : 264330485001
Option 4 ID : 264330484999
Status : Answered
Chosen Option : 2

Q.2 Suryoday Small Finance Bank is the company from _____ to obtain a 'small finance bank' license from the Reserve Bank of India.

- Ans 1. Madhya Pradesh
 2. Andhra Pradesh
 3. Maharashtra
 4. Gujarat

Question ID : 264330116493
Option 1 ID : 264330458057
Option 2 ID : 264330458060
Option 3 ID : 264330458058
Option 4 ID : 264330458059
Status : Answered
Chosen Option : 2

Q.3 In cricket, which of the following is considered as LBW?

- Ans 1. The fielder catches a batted ball on the fly.
 2. The batsman's body interferes with a bowled ball that would hit the wicket.
 3. The bowler knocks over (or, breaks) the wicket with a bowl.
 4. The fielder catches a ground ball and throws it at the wicket, knocking it down before the batsman gets there.

Question ID : 264330113758
Option 1 ID : 264330447119
Option 2 ID : 264330447117
Option 3 ID : 264330447118
Option 4 ID : 264330447120
Status : Answered
Chosen Option : 2

Q.4 The number of players playing in a team in the T20 cricket match is _____.

- Ans
- 1. 12
 - 2. 11
 - 3. 10
 - 4. 13

Question ID : 264330130647
Option 1 ID : 264330511701
Option 2 ID : 264330511700
Option 3 ID : 264330511699
Option 4 ID : 264330511702
Status : Answered
Chosen Option : 2

Q.5 Who among the following Delhi-based Bharatanatyam dancers received the Nritya Perunjyothi award for the year 2021?

- Ans
- 1. Lakshmi Vishwanathan
 - 2. Pandit Birju Maharaj
 - 3. Chitra Visweswaran
 - 4. Geeta Chandran

Question ID : 264330112874
Option 1 ID : 264330443583
Option 2 ID : 264330443584
Option 3 ID : 264330443581
Option 4 ID : 264330443582
Status : Not Attempted and Marked For Review
Chosen Option : --

Q.6 Typhoid is caused by _____.

- Ans
- 1. Protozoa
 - 2. bacteria
 - 3. Fungi
 - 4. Virus

Question ID : 264330117596
Option 1 ID : 264330462411
Option 2 ID : 264330462409
Option 3 ID : 264330462412
Option 4 ID : 264330462410
Status : Marked For Review
Chosen Option : 2

Q.7 Bhuban Kumar of Purulia is an award-winning _____ dancer.

- Ans
- 1. Kathak
 - 2. Kuchipudi
 - 3. Chhau
 - 4. Kathakali

Question ID : 264330182984
Option 1 ID : 264330717669
Option 2 ID : 264330717670
Option 3 ID : 264330717668
Option 4 ID : 264330717671
Status : Marked For Review
Chosen Option : 3

Q.8 Bindusara was the successor of which of the following Mauryan emperors?

- Ans 1. Shalishuka
 2. Chandragupta Maurya
 3. Ashoka
 4. Devavarman

Question ID : 264330182687
Option 1 ID : 264330716519
Option 2 ID : 264330716521
Option 3 ID : 264330716522
Option 4 ID : 264330716520
Status : Answered
Chosen Option : 2

Q.9 A small enterprise is one in which investment in plant and machinery does NOT exceed what amount?

- Ans 1. ₹5 crore
 2. ₹15 crore
 3. ₹10 crore
 4. ₹2 crore

Question ID : 264330118188
Option 1 ID : 264330464568
Option 2 ID : 264330464570
Option 3 ID : 264330464569
Option 4 ID : 264330464567
Status : Not Answered
Chosen Option : --

Q.10 Tribal Welfare Ministers in Chhattisgarh, Jharkhand, Madhya Pradesh and Odisha are appointed by the _____.

- Ans 1. Tribal Development Council
 2. Prime Minister
 3. Chief Minister
 4. Governor

Question ID : 264330120189
Option 1 ID : 264330471014
Option 2 ID : 264330471013
Option 3 ID : 264330471012
Option 4 ID : 264330471011
Status : Not Attempted and Marked For Review
Chosen Option : --

Q.11 The 'Hanukkah' celebration is associated with which of the following communities?

- Ans 1. Buddhist
 2. Jain
 3. Jewish
 4. Parsi

Question ID : 264330111154
Option 1 ID : 264330436704
Option 2 ID : 264330436701
Option 3 ID : 264330436703
Option 4 ID : 264330436702
Status : Answered
Chosen Option : 3

Q.12 Which Article empowers the Supreme Court to issue directions or writs for the enforcement of Fundamental Rights?

- Ans 1. Article 32
 2. Article 29
 3. Article 31
 4. Article 30

Question ID : 264330130779
Option 1 ID : 264330512230
Option 2 ID : 264330512227
Option 3 ID : 264330512229
Option 4 ID : 264330512228
Status : Answered
Chosen Option : 1

Q.13 According to the National Population Policy 2000, what is the target year for reaching stability in population?

- Ans 1. 2045
 2. 2050
 3. 2070
 4. 2065

Question ID : 264330120322
Option 1 ID : 264330471539
Option 2 ID : 264330471541
Option 3 ID : 264330471540
Option 4 ID : 264330471542
Status : Answered
Chosen Option : 3

Q.14 The practice of sati was made illegal and punishable in the year 1829, under Governor-General _____.

- Ans 1. William Bentinck
 2. John Shore
 3. Henry Hardinge
 4. Charles Metcalfe

Question ID : 264330117688
Option 1 ID : 264330462747
Option 2 ID : 264330462748
Option 3 ID : 264330462750
Option 4 ID : 264330462749
Status : Answered
Chosen Option : 1

Q.15 Which of the following tribal dances is performed in Tripura by the Mog community?

- Ans 1. Wangala
 2. Hozagiri
 3. Hai-Hak
 4. Sangrai

Question ID : 264330106194
Option 1 ID : 264330417077
Option 2 ID : 264330417080
Option 3 ID : 264330417079
Option 4 ID : 264330417078
Status : Answered
Chosen Option : 2

Q.16 Upon application of heat energy, the atoms of an ice cube start vibrating. At one point, the atoms have so much energy that they break away from their fixed position and lose the fixed structure. We can see this as the formation of water. What is this particular point called?

- Ans**
- 1. Softening point
 - 2. Decomposition temperature
 - 3. Boiling point
 - 4. Melting point

Question ID : 264330177022
Option 1 ID : 264330694285
Option 2 ID : 264330694286
Option 3 ID : 264330694283
Option 4 ID : 264330694284
Status : Answered
Chosen Option : 4

Q.17 Shivnath Mishra is an exponent of Benaras Gharana and he plays the _____ .

- Ans**
- 1. Harmonium
 - 2. Rudra Veena
 - 3. Sitar
 - 4. Tabla

Question ID : 264330111950
Option 1 ID : 264330439885
Option 2 ID : 264330439888
Option 3 ID : 264330439887
Option 4 ID : 264330439886
Status : Not Answered
Chosen Option : --

Q.18 As per the 2nd Advance Estimate of the Ministry of Agriculture and Farmers Welfare, the record foodgrains production of _____ million tonnes is estimated in India in the year 2021-22.

- Ans**
- 1. 378.54
 - 2. 420.78
 - 3. 501.16
 - 4. 316.06

Question ID : 264330119878
Option 1 ID : 264330469789
Option 2 ID : 264330469788
Option 3 ID : 264330469790
Option 4 ID : 264330469787
Status : Not Answered
Chosen Option : --

Q.19 Pancha Mahal is located in which of these cities?

- Ans 1. Fatehpur Sikri
 2. Jaipur
 3. Delhi
 4. Ahmedabad

Question ID : 264330109317
Option 1 ID : 264330429546
Option 2 ID : 264330429545
Option 3 ID : 264330429548
Option 4 ID : 264330429547
Status : Not Attempted and Marked For Review
Chosen Option : --

Q.20 In which of the following years was the Gandhi-Irwin Pact signed with the government agreeing to release all political prisoners?

- Ans 1. 1930
 2. 1928
 3. 1931
 4. 1929

Question ID : 264330112404
Option 1 ID : 264330441702
Option 2 ID : 264330441704
Option 3 ID : 264330441701
Option 4 ID : 264330441703
Status : Answered
Chosen Option : 3

Q.21 What is the full form of 'BPO'?

- Ans 1. Buying Process Outsourcing
 2. Business Product Outsourcing
 3. Business Process Outcome
 4. Business Process Outsourcing

Question ID : 26433059299
Option 1 ID : 264330232072
Option 2 ID : 264330232073
Option 3 ID : 264330232075
Option 4 ID : 264330232074
Status : Answered
Chosen Option : 2

Q.22 Which of the following is a biological name for a Housefly?

- Ans 1. Poaceae
 2. Triticum aestivum
 3. Primata
 4. Musca domestica

Question ID : 264330131732
Option 1 ID : 264330516029
Option 2 ID : 264330516027
Option 3 ID : 264330516030
Option 4 ID : 264330516028
Status : Answered
Chosen Option : 4

Q.23 Which of the following Articles pertain to the Right against Exploitation?

- Ans 1. Articles 23-24
 2. Articles 14-18
 3. Articles 25-28
 4. Articles 19-22

Question ID : 264330116392
Option 1 ID : 264330457655
Option 2 ID : 264330457653
Option 3 ID : 264330457656
Option 4 ID : 264330457654
Status : Answered
Chosen Option : 2

Q.24 What is used to make transparent soaps?

- Ans 1. Sodium chloride
 2. Ethanol
 3. Rosin
 4. Sodium carbonate

Question ID : 264330113343
Option 1 ID : 264330445457
Option 2 ID : 264330445459
Option 3 ID : 264330445460
Option 4 ID : 264330445458
Status : Not Attempted and Marked For Review
Chosen Option : --

Q.25 The concept of 'Concurrent List' in the Constitution of India is borrowed from _____.

- Ans 1. Australia
 2. Germany
 3. Japan
 4. Canada

Question ID : 264330133043
Option 1 ID : 264330521223
Option 2 ID : 264330521226
Option 3 ID : 264330521225
Option 4 ID : 264330521224
Status : Answered
Chosen Option : 1

Q.26 Biswa and Phulaich are the cultural festivals of _____.

- Ans 1. Himachal Pradesh
 2. West Bengal
 3. Karnataka
 4. Bihar

Question ID : 264330141781
Option 1 ID : 264330555443
Option 2 ID : 264330555445
Option 3 ID : 264330555446
Option 4 ID : 264330555444
Status : Not Answered
Chosen Option : --

Q.27 Which programme was restructured and renamed as 'National Rural Employment Programme'?

- Ans
- 1. Integrated Rural Development Programme
 - 2. Food for Work Programme
 - 3. National Institute of Rural Development
 - 4. Rural Landless Employment Guarantee Programme

Question ID : 264330112495
Option 1 ID : 264330442067
Option 2 ID : 264330442066
Option 3 ID : 264330442068
Option 4 ID : 264330442065
Status : Answered
Chosen Option : 4

Q.28 Which Article of the Constitution defines Advocate General as the legal advisor to a State Government?

- Ans
- 1. Article 166
 - 2. Article 165
 - 3. Article 164
 - 4. Article 167

Question ID : 264330168218
Option 1 ID : 264330659749
Option 2 ID : 264330659748
Option 3 ID : 264330659747
Option 4 ID : 264330659750
Status : Answered
Chosen Option : 2

Q.29 Which of the following Trophies/Cups is related to football?

- Ans
- 1. Davis Cup
 - 2. Sultan Azlan Shah Cup
 - 3. Ranji Trophy
 - 4. Santosh Trophy

Question ID : 264330132553
Option 1 ID : 264330519309
Option 2 ID : 264330519310
Option 3 ID : 264330519307
Option 4 ID : 264330519308
Status : Answered
Chosen Option : 4

Q.30 Which of the following unemployment types is the result of people voluntarily leaving jobs in search of better ones?

- Ans
- 1. Disguised unemployment
 - 2. Cyclical unemployment
 - 3. Frictional unemployment
 - 4. Structural unemployment

Question ID : 264330183053
Option 1 ID : 264330717946
Option 2 ID : 264330717947
Option 3 ID : 264330717945
Option 4 ID : 264330717944
Status : Answered
Chosen Option : 3

Q.31 When was Dev Samaj established?

- Ans
- 1. 1850
 - 2. 1902
 - 3. 1860
 - 4. 1887

Question ID : 264330114058
Option 1 ID : 264330448317
Option 2 ID : 264330448318
Option 3 ID : 264330448319
Option 4 ID : 264330448320
Status : Not Answered
Chosen Option : --

Q.32 Which of the following statements is/are true about Regional Rural Banks?

- I. RRBs were established in 1977.
- II. The Government of India contributes 50% of the share capital of RRB.
- III. Narasimham Committee recommended the amalgamation of RRBs.

- Ans
- 1. Only II and III
 - 2. Only I
 - 3. Only II
 - 4. Only III

Question ID : 264330141456
Option 1 ID : 264330554162
Option 2 ID : 264330554159
Option 3 ID : 264330554160
Option 4 ID : 264330554161
Status : Answered
Chosen Option : 4

Q.33 Padma Bhushan 2022, awardee _____ is a Hindustani Classical musician.

- Ans
- 1. Madhuri Barthwal
 - 2. Victor Banerjee
 - 3. Geeta Chandran
 - 4. Rashid Khan

Question ID : 264330111948
Option 1 ID : 264330439877
Option 2 ID : 264330439878
Option 3 ID : 264330439880
Option 4 ID : 264330439879
Status : Marked For Review
Chosen Option : 3

Q.34 Which of the following led to reservation of industrial activities for private and public sectors for the first time in India?

- Ans
- 1. The Industrial Policy Resolution, 1948
 - 2. Industrial Policy Resolution, 1956
 - 3. The Statement of Industrial Policy, 1945
 - 4. Industries Development and Regulation Act, 1951

Question ID : 264330111748
Option 1 ID : 264330439078
Option 2 ID : 264330439080
Option 3 ID : 264330439077
Option 4 ID : 264330439079
Status : Answered
Chosen Option : 2

Q.35 The term 'scoop' is used in which of the following sports?

- Ans
- 1. Hockey
 - 2. Tennis
 - 3. Badminton
 - 4. Football

Question ID : 264330118475
Option 1 ID : 264330465302
Option 2 ID : 264330465303
Option 3 ID : 264330465301
Option 4 ID : 264330465304
Status : Answered
Chosen Option : 1

Q.36 In which season do Western disturbances lead to rainfall in Northern states?

- Ans
- 1. Summer season
 - 2. Monsoon season
 - 3. Spring season
 - 4. Winter season

Question ID : 264330166377
Option 1 ID : 264330652562
Option 2 ID : 264330652561
Option 3 ID : 264330652560
Option 4 ID : 264330652559
Status : Answered
Chosen Option : 4

Q.37 In which of the following years did Mahatma Gandhi lead the Dandi March?

- Ans
- 1. 1930
 - 2. 1914
 - 3. 1919
 - 4. 1918

Question ID : 264330112411
Option 1 ID : 264330441732
Option 2 ID : 264330441729
Option 3 ID : 264330441731
Option 4 ID : 264330441730
Status : Answered
Chosen Option : 1

Q.38 For which of the following dance forms was Nalini Asthana awarded the Padma Shri in 2022?

- Ans 1. Kathak
 2. Kathakali
 3. Bharatanatyam
 4. Mohiniyattam

Question ID : 264330111970
Option 1 ID : 264330439965
Option 2 ID : 264330439966
Option 3 ID : 264330439967
Option 4 ID : 264330439968
Status : Answered
Chosen Option : 1

Q.39 The author of the book 'My Music, My Life' is the famous Sitar player. Who is he?

- Ans 1. Hari Prasad Chaurasia
 2. Ravi Shankar
 3. Zakir Hussain
 4. Brij Narayan

Question ID : 264330112862
Option 1 ID : 264330443535
Option 2 ID : 264330443533
Option 3 ID : 264330443534
Option 4 ID : 264330443536
Status : Answered
Chosen Option : 2

Q.40 During Chandragupta Maurya's reign, the administration of Pataliputra, which was the capital of the Mauryas was managed by how many committees?

- Ans 1. Three
 2. Eight
 3. Six
 4. Four

Question ID : 264330171665
Option 1 ID : 264330673263
Option 2 ID : 264330673266
Option 3 ID : 264330673265
Option 4 ID : 264330673264
Status : Answered
Chosen Option : 2

Q.41 Which of the following Articles of the Constitution of India says that a State shall not deny equal protection of the laws within the territory of India?

- Ans 1. Article 12
 2. Article 14
 3. Article 11
 4. Article 13

Question ID : 264330110577
Option 1 ID : 264330434586
Option 2 ID : 264330434588
Option 3 ID : 264330434585
Option 4 ID : 264330434587
Status : Answered
Chosen Option : 1

Q.42 In which two states is the Agasthyamala Biosphere Reserve located?

- Ans 1. Maharashtra and Gujarat
 2. Kerala and Tamil Nadu
 3. Madhya Pradesh and Uttar Pradesh
 4. Gujarat and Rajasthan

Question ID : 264330173628
Option 1 ID : 264330680993
Option 2 ID : 264330680994
Option 3 ID : 264330680992
Option 4 ID : 264330680991
Status : Answered
Chosen Option : 2

Q.43 The famous Hindi novel 'Suraj Ka SatvanGhoda' is written by:

- Ans 1. Kamleshwar
 2. Phanishwar Nath Renu
 3. Dharmveer Bharati
 4. Sri Lal Shukla

Question ID : 26433064630
Option 1 ID : 264330253113
Option 2 ID : 264330253114
Option 3 ID : 264330253112
Option 4 ID : 264330253115
Status : Answered
Chosen Option : 4

Q.44 In whose consultation does the President have the power to make rules to the procedure with respect to joint sittings of the two Houses?

- Ans 1. Chairman and Speaker
 2. Speaker and Members of Lok Sabha
 3. Speaker, Chairman and Members of Parliament
 4. Chairman and members of Rajya Sabha

Question ID : 264330110600
Option 1 ID : 264330434678
Option 2 ID : 264330434679
Option 3 ID : 264330434680
Option 4 ID : 264330434677
Status : Answered
Chosen Option : 1

Q.45 Who is the main architect of Shri Ram Mandir of Ayodhya?

- Ans 1. Chitra Vishwanath
 2. Chandrakant Bhai Sompura
 3. Sashi Prabhu
 4. Ram Suthar

Question ID : 26433074104
Option 1 ID : 264330290539
Option 2 ID : 264330290537
Option 3 ID : 264330290538
Option 4 ID : 264330290536
Status : Marked For Review
Chosen Option : 4

Q.46 Delhi first became the capital of a kingdom during the reign of the _____.

- Ans
- 1. Mamluks
 - 2. Tuglaqs
 - 3. Chauhans
 - 4. Tomara Rajputs

Question ID : 264330166881
Option 1 ID : 264330654560
Option 2 ID : 264330654561
Option 3 ID : 264330654559
Option 4 ID : 264330654562
Status : Answered
Chosen Option : 4

Q.47 According to Census 2011, which state of India has the lowest population?

- Ans
- 1. Mizoram
 - 2. Arunachal Pradesh
 - 3. Sikkim
 - 4. Goa

Question ID : 264330132741
Option 1 ID : 264330520061
Option 2 ID : 264330520060
Option 3 ID : 264330520062
Option 4 ID : 264330520059
Status : Answered
Chosen Option : 3

Q.48 Which of the following Iron and Steel Plants of India is situated on the coast of Bay of Bengal?

- Ans
- 1. Bhadravati
 - 2. Salem
 - 3. Durgapur
 - 4. Vishakhapatnam

Question ID : 264330120467
Option 1 ID : 264330472122
Option 2 ID : 264330472119
Option 3 ID : 264330472120
Option 4 ID : 264330472121
Status : Answered
Chosen Option : 3

Q.49 What is the position of the earth called when it is farthest from the sun during its revolution?

- Ans
- 1. Abherilion
 - 2. Pepihelion
 - 3. Perihelion
 - 4. Aphelion

Question ID : 264330134897
Option 1 ID : 264330528525
Option 2 ID : 264330528526
Option 3 ID : 264330528523
Option 4 ID : 264330528524
Status : Answered
Chosen Option : 4

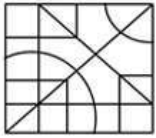
Q.50 Which Act led to the shift from curbing competition to promoting competition in the market?

- Ans**
- 1. MRTP Act 1969
 - 2. Competition Act 2002
 - 3. Banking Regulation Act 1949
 - 4. Copra Act

Question ID : 264330111620
Option 1 ID : 264330438565
Option 2 ID : 264330438567
Option 3 ID : 264330438568
Option 4 ID : 264330438566
Status : Answered
Chosen Option : 1

Section : Reasoning

Q.1 Select the option figure that is embedded in the given figure (rotation is NOT allowed).



Ans

- 1.
- 2.
- 3.
- 4.

Question ID : 26433091723
Option 1 ID : 264330360258
Option 2 ID : 264330360260
Option 3 ID : 264330360259
Option 4 ID : 264330360257
Status : Answered
Chosen Option : 3

Q.2 Select the option that is related to the fourth number in the same way as the first number is related to the second number and the fifth number is related to the sixth number.

252 : 6 :: ? : 9 :: 1872 : 12

- Ans
- 1. 829
 - 2. 729
 - 3. 810
 - 4. 750

Question ID : 26433052018

Option 1 ID : 264330203377

Option 2 ID : 264330203374

Option 3 ID : 264330203375

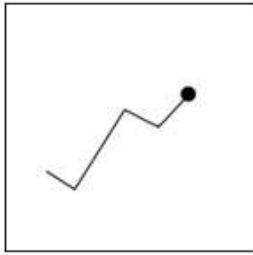
Option 4 ID : 264330203376

Status : Answered

Chosen Option : 3



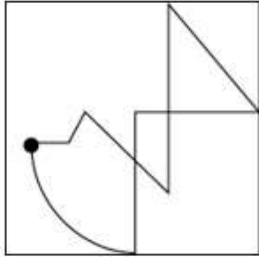
Q.3 Find out the figure amongst the four option in which figure X is embedded (Rotation is not allowed)



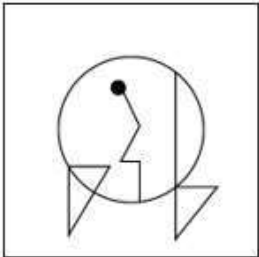
(X)

Ans

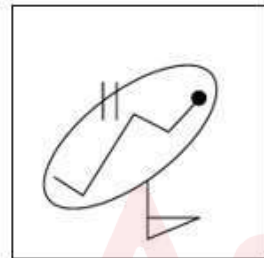
✗ 1.



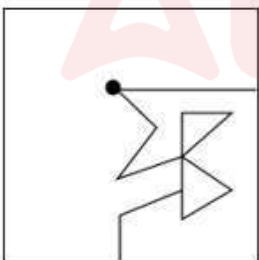
✗ 2.



✓ 3.



✗ 4.



Question ID : 264330121467

Option 1 ID : 264330476054

Option 2 ID : 264330476052

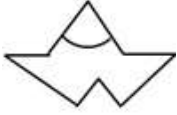
Option 3 ID : 264330476051

Option 4 ID : 264330476053

Status : Answered


Chosen Option : 3

Q.4 Select the option in which the given figure is embedded (rotation is NOT allowed).

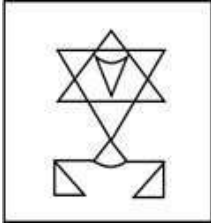


Ans

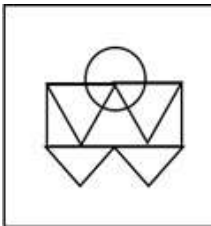
✗ 1.



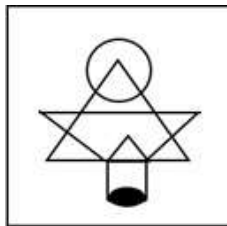
✗ 2.



✗ 3.



✓ 4.



Question ID : 264330117968

Option 1 ID : 264330463687

Option 2 ID : 264330463690

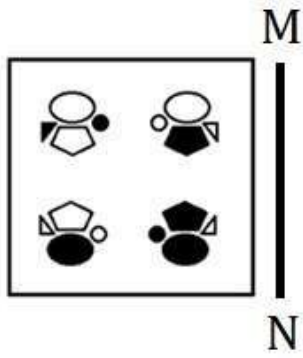
Option 3 ID : 264330463689

Option 4 ID : 264330463688

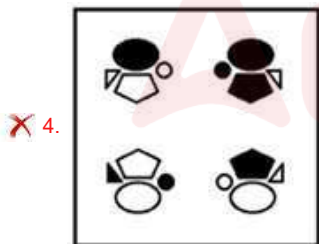
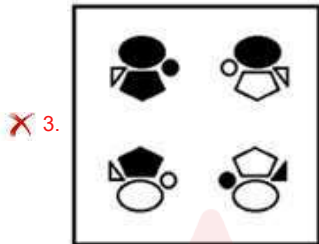
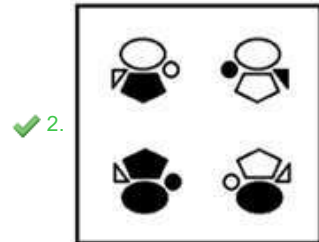
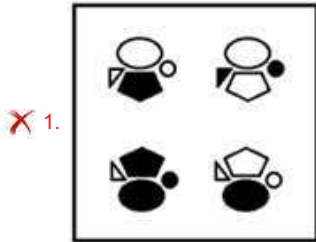
Status : Answered

Chosen Option : 4

Q.5 Select the correct mirror image of the given combination when the mirror is placed at 'MN' as shown below.



Ans



Question ID : 264330112310

Option 1 ID : 264330441328

Option 2 ID : 264330441326

Option 3 ID : 264330441327

Option 4 ID : 264330441325

Status : Answered

Chosen Option : 2

Q.6 Select the word-pair that best represents a similar relationship to the one expressed in the pair of words given below. (The words must be considered as meaningful English words and must not be related to each other based on the number of letters/number of consonants/vowels in the word)

Seismology : Earthquakes

- Ans 1. Ornithology : Birds
 2. Paedology : Plants
 3. Entomology : Bone
 4. Craniology : Muscle

Question ID : 264330180614

Option 1 ID : 264330708426

Option 2 ID : 264330708424

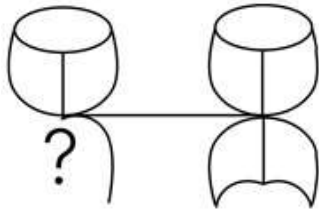
Option 3 ID : 264330708423

Option 4 ID : 264330708425

Status : Marked For Review

Chosen Option : 1

Q.7 Select the figure from the given options that will replace the question mark (?) in the figure given below to complete the pattern so that the final image is symmetrical.



Ans

- 1.
- 2.
- 3.
- 4.

Question ID : 264330114733

Option 1 ID : 264330451019

Option 2 ID : 264330451017

Option 3 ID : 264330451018

Option 4 ID : 264330451020

Status : Answered

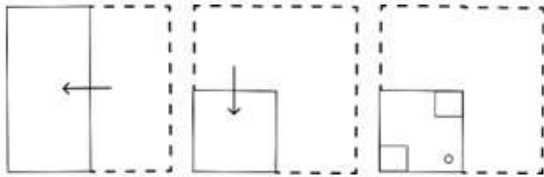
Chosen Option : 1

Q.8 In a certain code language, 'COMPUTER' is written as 'DQNRVVFT' and 'GARDENER' is written as 'HCSFFPFT'. How will 'ACADEMIC' be written as in that language?

- Ans
- 1. BEBEFOJE
 - 2. BFBFFOJE
 - 3. BECFFOJE
 - 4. BEBFFOJE

Question ID : 26433093121
Option 1 ID : 264330365740
Option 2 ID : 264330365737
Option 3 ID : 264330365739
Option 4 ID : 264330365738
Status : Answered
Chosen Option : 4

Q.9 A paper is folded and cut as shown below. How will it appear when unfolded?



Ans

- 1.
- 2.
- 3.
- 4.

Question ID : 264330114705
Option 1 ID : 264330450908
Option 2 ID : 264330450905
Option 3 ID : 264330450906
Option 4 ID : 264330450907
Status : Answered
Chosen Option : 3

Q.10 Select the correct combination of mathematical signs to sequentially replace the * signs and to balance the given equation.

$$34 * 58 * 2 * 96 * 4 = 29$$

Ans 1. -, ÷, +, ÷

2. ×, +, +, -

3. +, ×, -, ÷

4. ÷, ×, +, -

Question ID : 26433092507

Option 1 ID : 264330363320

Option 2 ID : 264330363319

Option 3 ID : 264330363318

Option 4 ID : 264330363317

Status : Answered

Chosen Option : 1

Q.11 Select the correct mirror image of the given combination when the mirror is placed at 'PQ' as shown below.

M 5 R Y 9 U | P
Q

Ans 1. U e Y Я Ʒ M

2. U e Y Я Ʒ M

3. U e Y Я Ʒ M

4. U e Y Я Ʒ M

Question ID : 264330129813

Option 1 ID : 264330508485

Option 2 ID : 264330508483

Option 3 ID : 264330508484

Option 4 ID : 264330508486

Status : Answered

Chosen Option : 1

Q.12 Which figure should replace the question mark (?) if the following series were to be continued?

B	A	A	4	4	
A	4	X	B	B	A
4			X	X	?

Ans

1.

	4	
A	B	X
	4	

2.

	4	
A	4	X
	B	

3.

	X	
A	4	B
	4	

4.

	X	
A	4	4
	B	

Question ID : 264330103889

Option 1 ID : 264330407858

Option 2 ID : 264330407857

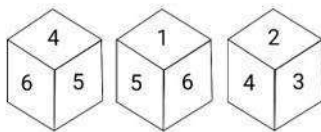
Option 3 ID : 264330407860

Option 4 ID : 264330407859

Status : Answered

Chosen Option : 2

Q.13 Three different positions of the same cube are shown. Which number is on the opposite side of 4?



Ans 1. 3

2. 5

3. 1

4. 2

Question ID : 264330112040

Option 1 ID : 264330440246

Option 2 ID : 264330440245

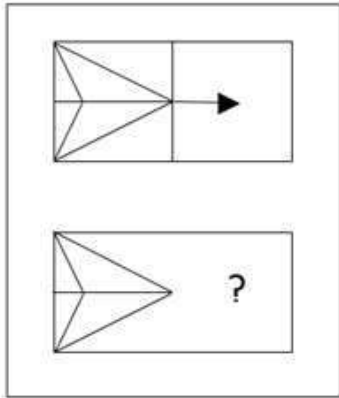
Option 3 ID : 264330440248

Option 4 ID : 264330440247

Status : Answered

Chosen Option : 3

Q.14 Select the figure from the options that can replace the question mark (?) and complete the given pattern so that final image is symmetrical.



Ans

- 1.
- 2.
- 3.
- 4.

Question ID : 264330121813

Option 1 ID : 264330477424

Option 2 ID : 264330477426

Option 3 ID : 264330477425

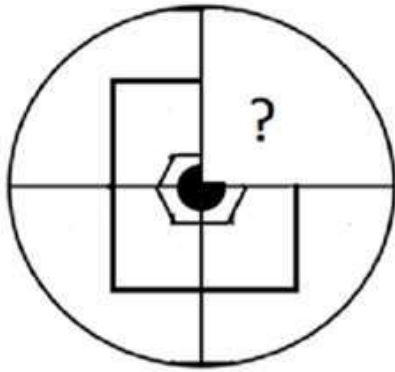
Option 4 ID : 264330477423

Status : Answered

Chosen Option : 4

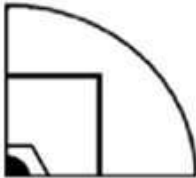
Adda247

Q.15 Select the option figure that will replace the question mark (?) in the figure given below to complete the pattern.



Ans

✓ 1.



✗ 2.



✗ 3.



✗ 4.



Question ID : 264330118233

Option 1 ID : 264330464750

Option 2 ID : 264330464749

Option 3 ID : 264330464747

Option 4 ID : 264330464748

Status : Answered

Chosen Option : 1

Q.16 Select the option that represents the letters that, when sequentially placed from left to right in the blanks below, will complete the letter series.

C _ _ D F _ A S _ F _ A S D _ C A _ D _

- Ans
- 1. ASCDCSSF
 - 2. ASCDCDSF
 - 3. ASCDCFSF
 - 4. ASCDFCSF

Question ID : 26433092545
Option 1 ID : 264330363471
Option 2 ID : 264330363470
Option 3 ID : 264330363472
Option 4 ID : 264330363469
Status : Answered
Chosen Option : 3

Q.17 Select the number from among the given options that can replace the question mark (?) in the following series.

6, 14, 46, 174, 686, ?

- Ans
- 1. 897
 - 2. 3232
 - 3. 2734
 - 4. 344

Question ID : 264330109752
Option 1 ID : 264330431288
Option 2 ID : 264330431285
Option 3 ID : 264330431286
Option 4 ID : 264330431287
Status : Answered
Chosen Option : 3

Q.18 Read the given statements and conclusions carefully. Assuming that the information given in the statements is true, even if it appears to be at variance with commonly known facts, decide which of the given conclusions logically follow(s) from the statements.

Statements:

Some soldiers are officers.

Some officers are civilians.

Conclusions:

I. All soldiers are civilians.

II. All civilians are soldiers.

- Ans
- 1. Neither conclusion I nor II follows
 - 2. Only conclusion II follows
 - 3. Only conclusion I follows
 - 4. Both conclusions I and II follow

Question ID : 26433068295
Option 1 ID : 264330267695
Option 2 ID : 264330267693
Option 3 ID : 264330267692
Option 4 ID : 264330267694
Status : Answered
Chosen Option : 1

Q.19 Six students are sitting around a circular table facing the centre. Dipan is an immediate neighbour of both Hansika and Gargi. Ekansh is sitting second to the left of Gargi. Iman is sitting third to the right of Hansika. Firoz is an immediate neighbour of both Ekansh and Hansika. Who is an immediate neighbour of both Dipan and Iman?

- Ans 1. Hansika
 2. Gargi
 3. Firoz
 4. Ekansh

Question ID : 264330110710
 Option 1 ID : 264330435120
 Option 2 ID : 264330435117
 Option 3 ID : 264330435118
 Option 4 ID : 264330435119
 Status : Answered
 Chosen Option : 2

Q.20 Select the correct combination of mathematical signs that can sequentially replace the * signs and balance the given expression.
 $55 * 11 * 7 * 9 * 32 * 36$

- Ans 1. +, -, ×, +, =
 2. +, ×, -, =, +
 3. ÷, +, ×, -, =
 4. ×, +, -, ÷, =

Question ID : 26433074781
 Option 1 ID : 264330293215
 Option 2 ID : 264330293214
 Option 3 ID : 264330293212
 Option 4 ID : 264330293213
 Status : Answered
 Chosen Option : 3

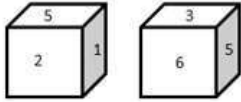
Q.21 Select the figure that will replace the question mark (?) in the following figure series.



- Ans 1.
 2.
 3.
 4.

Question ID : 264330108959
 Option 1 ID : 264330428114
 Option 2 ID : 264330428115
 Option 3 ID : 264330428116
 Option 4 ID : 264330428113
 Status : Answered
 Chosen Option : 4

Q.22 A dice with six faces is marked with six numbers 1, 2,3,4,5 and 6, respectively.
It is rolled 2 times and lands on the positions shown below. Which number is on the opposite plane of 2?



- Ans**
- 1. 4
 - 2. 1
 - 3. 5
 - 4. 3

Question ID : 264330110542

Option 1 ID : 264330434445

Option 2 ID : 264330434446

Option 3 ID : 264330434447

Option 4 ID : 264330434448

Status : Answered

Chosen Option : 4



Q.23 In this question, Figure X is followed by four figures, numbered (1), (2), (3) and (4).
Select the option in which Figure X is embedded.



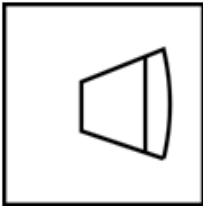
(X)

Ans

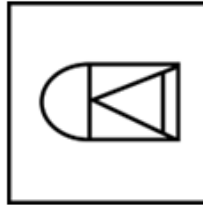
✗ 1.



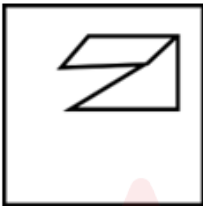
✗ 2.



✓ 3.



✗ 4.



Question ID : 264330175617

Option 1 ID : 264330688789

Option 2 ID : 264330688788

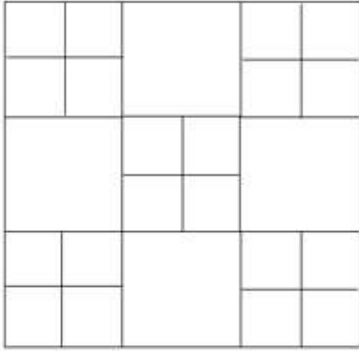
Option 3 ID : 264330688787

Option 4 ID : 264330688790

Status : Answered

Chosen Option : 3

Q.24 How many squares are there in the given figure?




- Ans 1. 36
 2. 34
 3. 32
 4. 30

Question ID : 26433085581
Option 1 ID : 264330336028
Option 2 ID : 264330336027
Option 3 ID : 264330336026
Option 4 ID : 264330336025

Status : Answered

Chosen Option : 2



Q.25 Which figure should replace the question mark (?) if the series were to be continued?

P A S T E	H A R T Z	Z T A R H	V T O R C	?
-----------	-----------	-----------	-----------	---

Ans

1. C O R T V

2. C V T O R

3. C R T O V

4. C R O T V

Question ID : 264330130822

Option 1 ID : 264330512401

Option 2 ID : 264330512399

Option 3 ID : 264330512402

Option 4 ID : 264330512400

Status : Answered

Chosen Option : 3

Section : Numerical Ability

Q.1 If $5.5x = 0.05y$, then the value of $\frac{y - 3x}{y + 3x}$ is:

1. $\frac{103}{113}$

2. $\frac{107}{117}$

3. $\frac{111}{113}$

4. $\frac{107}{113}$

Question ID : 264330105981

Option 1 ID : 264330416225

Option 2 ID : 264330416228

Option 3 ID : 264330416227

Option 4 ID : 264330416226

Status : Answered

Chosen Option : 4

Q.2 The diameter of a right circular cone is 14 cm, while its slant height is 11 cm. What is the volume of the cone? (Use $\pi = \frac{22}{7}$)

- Ans
- 1. $108\sqrt{2}\text{ cm}^3$
 - 2. $308\sqrt{2}\text{ cm}^3$
 - 3. $407\sqrt{3}\text{ cm}^3$
 - 4. $208\sqrt{2}\text{ cm}^3$

Question ID : 264330119370
Option 1 ID : 264330467769
Option 2 ID : 264330467767
Option 3 ID : 264330467768
Option 4 ID : 264330467770
Status : Answered
Chosen Option : 2

Q.3 A man bought 16 articles at ₹85 each, 15 at ₹65 each, and 12 at ₹75 each. What is the average price of each article? (Up to two places of decimal)

- Ans
- 1. ₹75.23
 - 2. ₹77.65
 - 3. ₹72.65
 - 4. ₹69.87

Question ID : 264330118411
Option 1 ID : 264330465045
Option 2 ID : 264330465048
Option 3 ID : 264330465046
Option 4 ID : 264330465047
Status : Answered
Chosen Option : 1

Q.4 The difference (in ₹, to the nearest integer) between the simple interest and the compound interest on ₹3,660 for one and a half years at 10% per annum, compounded half-yearly, is:

- Ans
- 1. 49
 - 2. 42
 - 3. 28
 - 4. 36

Question ID : 264330103559
Option 1 ID : 264330406541
Option 2 ID : 264330406543
Option 3 ID : 264330406542
Option 4 ID : 264330406544
Status : Not Answered
Chosen Option : --

Q.5 Rama's marks in two subjects, mathematics and physics, are in the ratio 8:13. If he got 25 marks more in physics than in mathematics, what are his marks in mathematics?

- Ans
- 1. 30
 - 2. 40
 - 3. 35
 - 4. 25

Question ID : 264330111469
Option 1 ID : 264330437961
Option 2 ID : 264330437964
Option 3 ID : 264330437963
Option 4 ID : 264330437962
Status : Answered
Chosen Option : 2

Q.6 The product of two numbers is 2028 and their HCF is 13. Find their LCM.

- Ans
- 1. 168
 - 2. 186
 - 3. 156
 - 4. 142

Question ID : 264330104215
Option 1 ID : 264330409162
Option 2 ID : 264330409164
Option 3 ID : 264330409161
Option 4 ID : 264330409163
Status : Answered
Chosen Option : 3

Q.7 A garrison of 1200 men has provisions for 15 days. How long will the provisions last if the garrison is increased by 600 men?

- Ans
- 1. 10 days
 - 2. 6 days
 - 3. 14 days
 - 4. 12 days

Question ID : 264330182574
Option 1 ID : 264330716088
Option 2 ID : 264330716087
Option 3 ID : 264330716090
Option 4 ID : 264330716089
Status : Answered
Chosen Option : 1

Q.8 What must be the total percentage change (rounded off to 1 decimal place) in the volume of a cuboid if its length and breadth are increased by 24% and 45%, respectively, while its height is decreased by 55%?

- Ans
- 1. Increase, 14.9%
 - 2. Decrease, 19.1%
 - 3. Decrease, 14.9%
 - 4. Increase, 19.1%

Question ID : 264330165070

Option 1 ID : 264330647409

Option 2 ID : 264330647408

Option 3 ID : 264330647410

Option 4 ID : 264330647407

Status : Answered

Chosen Option : 2

Q.9 Kumar invested a total of ₹16,900 partly in two schemes, A and B. The rate of simple interest in the two schemes were 14% p.a. and 11% p.a., respectively. If the total interest earned in 2 years was ₹4,498, then what was the amount invested in Scheme B?

- Ans
- 1. ₹3,200
 - 2. ₹3,900
 - 3. ₹3,000
 - 4. ₹4,900

Question ID : 264330118084

Option 1 ID : 264330464153

Option 2 ID : 264330464151

Option 3 ID : 264330464154

Option 4 ID : 264330464152

Status : Answered

Chosen Option : 2

Q.10 An item was sold at a profit of 23.75%. If the cost price of the item was ₹1,000 more than what it actually was, while the selling price remained unchanged, the profit earned would have been only 10%. What was the actual cost price of the item (in ₹)?

- Ans
- 1. 8000
 - 2. 8600
 - 3. 8500
 - 4. 7500

Question ID : 264330112539

Option 1 ID : 264330442242

Option 2 ID : 264330442244

Option 3 ID : 264330442241

Option 4 ID : 264330442243

Status : Not Answered

Chosen Option : --

Q.11 Rewa misread the number 45 as 54. Find the percentage increase or decrease in this process.

- Ans
- 1. 15% decrease
 - 2. 20% increase
 - 3. 15% increase
 - 4. 20% decrease

Question ID : 264330131445
Option 1 ID : 264330514885
Option 2 ID : 264330514884
Option 3 ID : 264330514886
Option 4 ID : 264330514883
Status : Answered
Chosen Option : 2

Q.12 A shopkeeper sells an article for ₹360 after allowing a discount of 10%. What would have been its selling price (in ₹) had he offered a discount of 20%?

- Ans
- 1. 300
 - 2. 320
 - 3. 340
 - 4. 290

Question ID : 264330183844
Option 1 ID : 264330721052
Option 2 ID : 264330721053
Option 3 ID : 264330721054
Option 4 ID : 264330721055
Status : Answered
Chosen Option : 2

Q.13 Find the total surface area (in cm^2) of a cylinder with the diameter of base 21 cm and height 42 cm.

(Take $\pi = \frac{22}{7}$)

- Ans
- 1. 3480
 - 2. 3456
 - 3. 3450
 - 4. 3465

Question ID : 264330112441
Option 1 ID : 264330441852
Option 2 ID : 264330441851
Option 3 ID : 264330441850
Option 4 ID : 264330441849
Status : Answered
Chosen Option : 4

Q.14 A policeman chases a thief who is at a distance of 450 metres from him. The thief starts running at a speed of 9 km/h, the moment he sees the policeman. The policeman gives chase immediately with a speed of 12 km/h. Eventually, the thief is caught. What is the distance (in km) run by the thief?

Ans ✓ 1. 1.35

✗ 2. 1.65

✗ 3. 1.25

✗ 4. 1.55

Question ID : 264330183834

Option 1 ID : 264330721012

Option 2 ID : 264330721013

Option 3 ID : 264330721014

Option 4 ID : 264330721015

Status : Answered

Chosen Option : 1

Q.15 Which of the following numbers is a prime number?

Ans ✓ 1. 1049

✗ 2. 901

✗ 3. 917

✗ 4. 1047

Question ID : 264330106072

Option 1 ID : 264330416590

Option 2 ID : 264330416591

Option 3 ID : 264330416592

Option 4 ID : 264330416589

Status : Answered

Chosen Option : 1

Section : Computer Proficiency

Q.1 In MS Word 365, which of the following shortcut is used to centre align the selected text?

Ans ✗ 1. Ctrl + Shift + C

✓ 2. Ctrl + E

✗ 3. Ctrl + C

✗ 4. Ctrl + Shift + E

Question ID : 264330173359

Option 1 ID : 264330679918

Option 2 ID : 264330679915

Option 3 ID : 264330679916

Option 4 ID : 264330679917

Status : Answered

Chosen Option : 2

Q.2 In MS Excel 365, the title bar in Microsoft Excel is used for:

- Ans 1. displaying the title of a workbook
2. displaying the title of a sheet
3. displaying the title of a column
4. displaying the title of a row

Question ID : 264330182049
Option 1 ID : 264330714036
Option 2 ID : 264330714035
Option 3 ID : 264330714037
Option 4 ID : 264330714038
Status : Answered
Chosen Option : 2

Q.3 Which of the following keyboard shortcuts is/are used to open the Find and Replace dialog box in MS Word 365?

- a) Ctrl + H
b) Ctrl + R

- Ans 1. Neither (a) nor (b)
2. Only (b)
3. Only (a)
4. Both (a) and (b)

Question ID : 264330180635
Option 1 ID : 264330708510
Option 2 ID : 264330708508
Option 3 ID : 264330708507
Option 4 ID : 264330708509
Status : Answered
Chosen Option : 3

Q.4 Which architecture connects individual devices directly, with equal responsibilities and powers, and without a central authority?

- Ans 1. Peer-to-Peer architecture
2. Distributed architecture
3. Client-Server architecture
4. Centralised architecture

Question ID : 264330179150
Option 1 ID : 264330702603
Option 2 ID : 264330702606
Option 3 ID : 264330702604
Option 4 ID : 264330702605
Status : Answered
Chosen Option : 1

Q.5 Which of the following is a simple function in MS Excel 365, that raises a given number to an exponent?

- Ans
- 1. AVERAGE
 - 2. RAND
 - 3. POWER
 - 4. MEDIAN

Question ID : 264330180408
Option 1 ID : 264330707600
Option 2 ID : 264330707602
Option 3 ID : 264330707601
Option 4 ID : 264330707599
Status : Answered
Chosen Option : 3

Q.6 You have created a new document in MS Word 365 and you have made some changes to it. You want to save the document, but you also want to create a copy of it with a different name. Which of the following commands should you use?

- Ans
- 1. Save
 - 2. Open
 - 3. Save As
 - 4. Close

Question ID : 264330178582
Option 1 ID : 264330700355
Option 2 ID : 264330700358
Option 3 ID : 264330700356
Option 4 ID : 264330700357
Status : Answered
Chosen Option : 3

Q.7 _____ can help detect spelling and grammatical errors in Microsoft Word 365.

- Ans
- 1. Pressing 'F8'
 - 2. Pressing 'F7'
 - 3. Pressing 'Alt+ F8'
 - 4. Pressing 'Alt+ F7'

Question ID : 264330182082
Option 1 ID : 264330714169
Option 2 ID : 264330714167
Option 3 ID : 264330714170
Option 4 ID : 264330714168
Status : Answered
Chosen Option : 2

Q.8 In Microsoft Excel, letters of the alphabet are used to define which of the following?

- Ans
- 1. Sheet
 - 2. Row
 - 3. Column
 - 4. Table

Question ID : 264330182043
Option 1 ID : 264330714013
Option 2 ID : 264330714011
Option 3 ID : 264330714012
Option 4 ID : 264330714014
Status : Answered
Chosen Option : 3

Q.9 Any message you are writing until you send it or trash it, is called:

- Ans**
- 1. Sent Mail
 - 2. Starred Mail
 - 3. Received Mail
 - 4. Draft Mail

Question ID : **264330175934**
Option 1 ID : **264330690034**
Option 2 ID : **264330690031**
Option 3 ID : **264330690033**
Option 4 ID : **264330690032**
Status : **Answered**
Chosen Option : **4**

Q.10 What action is performed by pressing the 'Delete' key on the keyboard in Microsoft Word 365?

- Ans**
- 1. Removes the selected text
 - 2. Undo the last action
 - 3. Cuts the selected text
 - 4. Copies the selected text

Question ID : **264330173595**
Option 1 ID : **264330680859**
Option 2 ID : **264330680862**
Option 3 ID : **264330680860**
Option 4 ID : **264330680861**
Status : **Answered**
Chosen Option : **1**

Constable Executive Male and Female in Delhi Police Examination 2023

Roll Number	
Candidate Name	
Venue Name	OCBT IT services
Exam Date	24/11/2023
Exam Time	9:00 AM - 10:30 AM
Subject	Constable Executive Male and Female in Delhi Police Examination 2023

Section : **General Knowledge**

Q.1 In karate, the fight starts when the referee shouts "_____".

- Ans 1. Yame
 2. Shobu Hajime!
 3. Kaizen
 4. Yuko

Question ID : 264330113777
Option 1 ID : 264330447194
Option 2 ID : 264330447193
Option 3 ID : 264330447195
Option 4 ID : 264330447196
Status : Answered
Chosen Option : 1

Q.2 Who decides the disqualification of members of State Legislative Assembly, for matters other than those in the Tenth Schedule of the Constitution of India?

- Ans 1. Chief Minister
 2. High Court
 3. State Election Commission
 4. Governor

Question ID : 264330130489
Option 1 ID : 264330511067
Option 2 ID : 264330511068
Option 3 ID : 264330511070
Option 4 ID : 264330511069
Status : Answered
Chosen Option : 4

Q.3 Who among the following received the Padma Shri in 2022 for performing the Rai folk dance form of Madhya Pradesh?

- Ans 1. AKC Natrajan
 2. Sheesh Ram
 3. Ram Sahay Pandey
 4. Ballesh Bhajantri

Question ID : 264330111976
Option 1 ID : 264330439991
Option 2 ID : 264330439990
Option 3 ID : 264330439989
Option 4 ID : 264330439992
Status : Answered
Chosen Option : 1

Q.4 In which year was MS Subbulakshmi honoured with the Bharat Ratna?

- Ans 1. 1998
 2. 1997
 3. 1995
 4. 1996

Question ID : 264330116422
Option 1 ID : 264330457776
Option 2 ID : 264330457775
Option 3 ID : 264330457773
Option 4 ID : 264330457774
Status : Answered
Chosen Option : 4

Q.5 Whom did Gopal Krishna Gokhale call 'the best ambassador of Hindu-Muslim unity'?

- Ans 1. Mohammad Ali Jinnah
 2. Maulana Abul Kalam Azad
 3. Jawaharlal Nehru
 4. Mahatma Gandhi

Question ID : 264330119016
Option 1 ID : 264330466721
Option 2 ID : 264330466722
Option 3 ID : 264330466720
Option 4 ID : 264330466719
Status : Answered
Chosen Option : 4

Q.6 During the sixth century BCE, as part of the 'Shraman' tradition, which of the following new religious and social movements began in the Gangetic valley?

- Ans 1. Sufism
 2. Christianity
 3. Buddhism
 4. Islam

Question ID : 264330118947
Option 1 ID : 264330466446
Option 2 ID : 264330466445
Option 3 ID : 264330466444
Option 4 ID : 264330466443
Status : Answered
Chosen Option : 3

Q.7 The historic Asamai temple is located in _____ in Afghanistan.

- Ans 1. Kandahar
 2. Kabul
 3. Ghazni
 4. Feyzabad

Question ID : 264330119831
Option 1 ID : 264330469600
Option 2 ID : 264330469599
Option 3 ID : 264330469602
Option 4 ID : 264330469601
Status : Answered
Chosen Option : 1

Q.8 On which date in 1991 was the Indian rupee devalued?

- Ans
- 1. 1st January
 - 2. 15th October
 - 3. 30th July
 - 4. 1st July

Question ID : 264330109417
Option 1 ID : 264330429945
Option 2 ID : 264330429948
Option 3 ID : 264330429947
Option 4 ID : 264330429946
Status : Answered
Chosen Option : 4

Q.9 The term 'protectionist policy' in the industrial sector in the pre-1990 India refers to _____.

- Ans
- 1. protecting public sector companies from domestic private sector companies
 - 2. protecting private companies from incurring losses
 - 3. protecting domestic companies from the competition of foreign companies
 - 4. protecting private sector companies from the competition of public sector companies

Question ID : 264330111749
Option 1 ID : 264330439083
Option 2 ID : 264330439081
Option 3 ID : 264330439082
Option 4 ID : 264330439084
Status : Answered
Chosen Option : 3

Q.10 उत्तर भारतीय मंदिर वास्तुकला के शीर्ष पर सपाट गोल (स्टोन-डिस्क) संरचना के लिए निम्नलिखित में से किस शब्द का उपयोग किया जाता है?

- Ans
- 1. शिखर (Shikhara)
 - 2. कलश (Kalasha)
 - 3. अमलक (Amalaka)
 - 4. अंतराल (Antarala)

Question ID : 264330165331
Option 1 ID : 264330648404
Option 2 ID : 264330648403
Option 3 ID : 264330648406
Option 4 ID : 264330648405
Status : Answered
Chosen Option : 2

Q.11 भारतीय संविधान का कौन-सा अनुच्छेद धार्मिक मामलों के प्रबंधन के अधिकार की गारंटी देता है?

- Ans
- 1. अनुच्छेद 25
 - 2. अनुच्छेद 28
 - 3. अनुच्छेद 27
 - 4. अनुच्छेद 26

Question ID : 264330114490
Option 1 ID : 264330450045
Option 2 ID : 264330450048
Option 3 ID : 264330450047
Option 4 ID : 264330450046
Status : Answered
Chosen Option : 4

Q.12 Which of the following festivals of Mizoram is celebrated to promote horticulture?

- Ans 1. Hlukhla Kut
 2. Anthurium
 3. Khuado Kut
 4. Lyuva Khutla

Question ID : 264330106224
Option 1 ID : 264330417200
Option 2 ID : 264330417198
Option 3 ID : 264330417199
Option 4 ID : 264330417197
Status : Answered
Chosen Option : 3

Q.13 Which of the following authors has written the great English novel 'Moby-Dick'?

- Ans 1. Wilkie Collins
 2. Herman Melville
 3. Nathaniel Hawthorne
 4. Thomas Hardy

Question ID : 26433066679
Option 1 ID : 264330261241
Option 2 ID : 264330261243
Option 3 ID : 264330261240
Option 4 ID : 264330261242
Status : Not Answered
Chosen Option : --

Q.14 होली के त्योहार के संबंध में निम्नलिखित में से कौन सा/से कथन सही है/हैं?

- A. होली से एक रात पहले, होलिका दहन होता है और लोग आग की परिक्रमा करते हैं, जो होलिका के अंत का प्रतीक है।
B. त्योहार शरद ऋतु की शुरुआत का प्रतीक है।
C. होली का त्योहार माघ मास (हिंदू कैलेंडर) में मनाया जाता है।

- Ans 1. केवल B और C
 2. केवल A और C
 3. A,B और C
 4. केवल A

Question ID : 264330119837
Option 1 ID : 264330469624
Option 2 ID : 264330469626
Option 3 ID : 264330469623
Option 4 ID : 264330469625
Status : Answered
Chosen Option : 3

Q.15 Where is the tomb of Mohammad Ghaus located?

- Ans 1. Agra
 2. Gwalior
 3. Delhi
 4. Burhanpur

Question ID : 26433074102
Option 1 ID : 264330290529
Option 2 ID : 264330290530
Option 3 ID : 264330290531
Option 4 ID : 264330290528
Status : Answered
Chosen Option : 1

Q.16 Who wrote 'The Story of My Experiments with Truth'?

- Ans 1. Gopal Krishna Gokhale
 2. Jawaharlal Nehru
 3. Mohandas Karamchand Gandhi
 4. Bal Gangadhar Tilak

Question ID : 26433072940
Option 1 ID : 264330285953
Option 2 ID : 264330285955
Option 3 ID : 264330285952
Option 4 ID : 264330285954
Status : Answered
Chosen Option : 3

Q.17 In a 100 m Relay Race, how many athletes have to complete a race?

- Ans 1. 2
 2. 3
 3. 4
 4. 6

Question ID : 264330118483
Option 1 ID : 264330465333
Option 2 ID : 264330465334
Option 3 ID : 264330465335
Option 4 ID : 264330465336
Status : Answered
Chosen Option : 2

Q.18 As of July 2023, which of the following dances from Kerala has been given a classical status by the Indian government?

- Ans 1. Kolkali
 2. Thiruvathirakali
 3. Velakali
 4. Mohiniyattam

Question ID : 264330182982
Option 1 ID : 264330717662
Option 2 ID : 264330717663
Option 3 ID : 264330717660
Option 4 ID : 264330717661
Status : Answered
Chosen Option : 4

Q.19 Table sugar mostly contains:

- Ans 1. maltose
 2. sucrose
 3. fructose
 4. glucose

Question ID : 264330177335
Option 1 ID : 264330695533
Option 2 ID : 264330695531
Option 3 ID : 264330695534
Option 4 ID : 264330695532
Status : Answered
Chosen Option : 2

Q.20 The total replenishable groundwater resource in the country is about 432 cubic km. Accordingly, which water body has 26.55% of the total replenishable groundwater resource?

- Ans 1. Mahanadi
 2. Brahmaputra
 3. Kaveri
 4. Godavari

Question ID : 264330113525
Option 1 ID : 264330446187
Option 2 ID : 264330446185
Option 3 ID : 264330446186
Option 4 ID : 264330446188
Status : Answered
Chosen Option : 4

Q.21 The legendary Kuchipudi dancer and Padma Shri 1970 awardee, V Satyanarayana Sarma was born in _____ .

- Ans 1. Andhra Pradesh
 2. Tamil Nadu
 3. Kerala
 4. Karnataka

Question ID : 264330111982
Option 1 ID : 264330440013
Option 2 ID : 264330440016
Option 3 ID : 264330440014
Option 4 ID : 264330440015
Status : Answered
Chosen Option : 1

Q.22 Which physical component is required for transfer of antherozoids?

- Ans 1. Air
 2. Soil
 3. Light
 4. Water

Question ID : 264330113318
Option 1 ID : 264330445357
Option 2 ID : 264330445359
Option 3 ID : 264330445360
Option 4 ID : 264330445358
Status : Answered
Chosen Option : 2

Q.23 What is the minimum strength of the Legislative Council?

- Ans
- 1. 100 members
 - 2. 15 members
 - 3. 40 members
 - 4. 60 members

Question ID : 264330173542
Option 1 ID : 264330680650
Option 2 ID : 264330680648
Option 3 ID : 264330680647
Option 4 ID : 264330680649
Status : Answered
Chosen Option : 3

Q.24 Which of the following social reformers is credited with the establishment of 'Bharat Stree Mahamandal' in 1910?

- Ans
- 1. Sarojini Naidu
 - 2. Sarala Devi Chaudhurani
 - 3. Usha Mehta
 - 4. Savitri Bai Phule

Question ID : 264330130562
Option 1 ID : 264330511359
Option 2 ID : 264330511362
Option 3 ID : 264330511361
Option 4 ID : 264330511360
Status : Answered
Chosen Option : 1

Q.25 As per census 2011, which of the following states has the highest scheduled caste population?

- Ans
- 1. Tamil Nadu
 - 2. West Bengal
 - 3. Uttar Pradesh
 - 4. Bihar

Question ID : 264330179552
Option 1 ID : 264330704210
Option 2 ID : 264330704208
Option 3 ID : 264330704207
Option 4 ID : 264330704209
Status : Answered
Chosen Option : 4

Q.26 What is the name of the mascot for the fourth Khelo India Games?

- Ans
- 1. Jaya
 - 2. Veera
 - 3. Dhakad
 - 4. Vijaya

Question ID : 264330113741
Option 1 ID : 264330447050
Option 2 ID : 264330447049
Option 3 ID : 264330447052
Option 4 ID : 264330447051
Status : Answered
Chosen Option : 1

Q.27 The salary, allowances and pension of the Comptroller and Auditor General of India is charged upon _____.

- Ans
- 1. Public Account
 - 2. Consolidated Fund of State
 - 3. Consolidated Fund of India
 - 4. Contingency Fund of India

Question ID : 264330110594
Option 1 ID : 264330434653
Option 2 ID : 264330434654
Option 3 ID : 264330434656
Option 4 ID : 264330434655
Status : Answered
Chosen Option : 3

Q.28 Who built the famous stupa of Bharhut originally?

- Ans
- 1. Sunga
 - 2. Satavahana
 - 3. Maurya
 - 4. Kushan

Question ID : 264330117994
Option 1 ID : 264330463791
Option 2 ID : 264330463792
Option 3 ID : 264330463793
Option 4 ID : 264330463794
Status : Answered
Chosen Option : 3

Q.29 To solve the balance of payment crisis in 1991, the Indian Rupee was _____ against foreign currencies.

- Ans
- 1. devalued
 - 2. undervalued
 - 3. depreciated
 - 4. appreciated

Question ID : 264330111594
Option 1 ID : 264330438463
Option 2 ID : 264330438464
Option 3 ID : 264330438461
Option 4 ID : 264330438462
Status : Answered
Chosen Option : 3

Q.30 With which of the following rights do Articles 23 and 24 of the Indian Constitution deal with?

- Ans
- 1. Right to Freedom of Religion
 - 2. Right to Equality
 - 3. Right Against Exploitation
 - 4. Right to Constitutional Remedies

Question ID : 264330113384
Option 1 ID : 264330445622
Option 2 ID : 264330445621
Option 3 ID : 264330445623
Option 4 ID : 264330445624
Status : Answered
Chosen Option : 3

Q.31 In India, seasonal unemployment is predominantly associated with which field?

- Ans
- 1. Surface Transport
 - 2. Mining Industry
 - 3. Space and Technology
 - 4. Agriculture

Question ID : 264330183051
Option 1 ID : 264330717937
Option 2 ID : 264330717938
Option 3 ID : 264330717939
Option 4 ID : 264330717936
Status : Answered
Chosen Option : 4

Q.32 Muhammad Yunus, one of the pioneers in microfinance, founded Grameen Bank in which year?

- Ans
- 1. 1975
 - 2. 1990
 - 3. 1983
 - 4. 1989

Question ID : 264330118180
Option 1 ID : 264330464535
Option 2 ID : 264330464538
Option 3 ID : 264330464536
Option 4 ID : 264330464537
Status : Answered
Chosen Option : 1

Q.33 Select the most appropriate option with respect to the correctness of the following statements.

- a) The northern plains are a densely populated physiographic division.
- b) The plains have rich soil cover combined with adequate water supply and favourable climate, it is agriculturally a productive part of India.

- Ans
- 1. Both a and b are incorrect
 - 2. Only b is correct
 - 3. Only a is correct
 - 4. Both a and b are correct

Question ID : 264330179019
Option 1 ID : 264330702082
Option 2 ID : 264330702080
Option 3 ID : 264330702079
Option 4 ID : 264330702081
Status : Answered
Chosen Option : 4

Q.34 In which year did the first Khelo India School Games start?

- Ans 1. 2015
 2. 2018
 3. 2016
 4. 2017

Question ID : 264330176082
Option 1 ID : 264330690623
Option 2 ID : 264330690625
Option 3 ID : 264330690626
Option 4 ID : 264330690624
Status : Answered
Chosen Option : 1

Q.35 Who among the following won a Grammy Award for 'A Colorful World' in the Best Children's Album category in 2022?

- Ans 1. Raveena Aurora
 2. Monica Dogra
 3. Falguni Shah
 4. Tatyana Ali

Question ID : 264330110249
Option 1 ID : 264330433275
Option 2 ID : 264330433276
Option 3 ID : 264330433273
Option 4 ID : 264330433274
Status : Answered
Chosen Option : 3

Q.36 The first female sultan of Delhi sultanate, Raziyya Sultana, was the daughter of

- Ans 1. Muhammad Ghori
 2. Qutbuddin Aybak
 3. Muhammad Tughluq
 4. Shamsuddin Iltutmish

Question ID : 264330114079
Option 1 ID : 264330448403
Option 2 ID : 264330448404
Option 3 ID : 264330448401
Option 4 ID : 264330448402
Status : Answered
Chosen Option : 4

Q.37 In which state of India is shifting cultivation known as Pamlou?

- Ans 1. Odisha
 2. Manipur
 3. Madhya Pradesh
 4. Andhra Pradesh

Question ID : 264330173600
Option 1 ID : 264330680882
Option 2 ID : 264330680881
Option 3 ID : 264330680880
Option 4 ID : 264330680879
Status : Answered
Chosen Option : 2

Q.38 Interest received is a factor income from _____.

- Ans
- 1. Labour
 - 2. land
 - 3. entrepreneurship
 - 4. Capital

Question ID : 264330118243
Option 1 ID : 264330464789
Option 2 ID : 264330464787
Option 3 ID : 264330464790
Option 4 ID : 264330464788
Status : Answered
Chosen Option : 4

Q.39 As a result of the green revolution, India was able to change its status from _____

- Ans
- 1. a developing nation to a developed nation
 - 2. an agricultural nation to a manufacturing nation
 - 3. a slow growing nation to the fastest growing nation in the world
 - 4. a food deficient country to a leading agricultural nation

Question ID : 264330120895
Option 1 ID : 264330473795
Option 2 ID : 264330473797
Option 3 ID : 264330473798
Option 4 ID : 264330473796
Status : Answered
Chosen Option : 4

Q.40 Who was the first Indian to be elected to the Communist International leadership class?

- Ans
- 1. Manvendra Nath Roy
 - 2. Shripad Amrit Dange
 - 3. Jawaharlal Nehru
 - 4. Lala Lajpat Rai

Question ID : 264330114052
Option 1 ID : 264330448295
Option 2 ID : 264330448294
Option 3 ID : 264330448296
Option 4 ID : 264330448293
Status : Answered
Chosen Option : 3

Q.41 Molten state and very high-temperature are important criteria for the formation of which type of rocks?

- Ans
- 1. Igneous rocks
 - 2. Metamorphic rocks
 - 3. Sedimentary rocks
 - 4. Sphalerite ore rocks

Question ID : 264330131817
Option 1 ID : 264330516367
Option 2 ID : 264330516369
Option 3 ID : 264330516368
Option 4 ID : 264330516370
Status : Answered
Chosen Option : 1

Q.42 Which neighbouring country has emerged as the top destination of wheat exports from India in 2020-21, with the largest share of over 54 per cent both in terms of quantity and value?

- Ans
- 1. Sri Lanka
 - 2. Bhutan
 - 3. Nepal
 - 4. Bangladesh

Question ID : 264330120361
Option 1 ID : 264330471698
Option 2 ID : 264330471695
Option 3 ID : 264330471697
Option 4 ID : 264330471696
Status : Answered
Chosen Option : 1

Q.43 Who among the following was the author of Kitab-ul-Hind based on India?

- Ans
- 1. Marco Polo
 - 2. Abdur Razzak
 - 3. Al Masudi
 - 4. Al Beruni

Question ID : 264330182705
Option 1 ID : 264330716591
Option 2 ID : 264330716592
Option 3 ID : 264330716593
Option 4 ID : 264330716594
Status : Answered
Chosen Option : 4

Q.44 Which kind of emergency is imposed on the grounds of threat to the economic stability or credit of India?

- Ans
- 1. President's Rule
 - 2. National Emergency
 - 3. Financial Emergency
 - 4. Internal Emergency

Question ID : 264330173473
Option 1 ID : 264330680372
Option 2 ID : 264330680371
Option 3 ID : 264330680373
Option 4 ID : 264330680374
Status : Answered
Chosen Option : 3

Q.45 Which of the following is a salient feature of the Indian Constitution?

- Ans
- 1. It is the shortest written Constitution in the world.
 - 2. It was adopted before India got independence.
 - 3. It is the longest written Constitution in the world.
 - 4. It is not a written Constitution.

Question ID : 264330120504
Option 1 ID : 264330472268
Option 2 ID : 264330472267
Option 3 ID : 264330472270
Option 4 ID : 264330472269
Status : Answered
Chosen Option : 3

Q.46 'Beri-Beri' is caused by the deficiency of _____.

- Ans
- 1. Riboflavin
 - 2. Cyanocobalamin
 - 3. Niacin
 - 4. thiamine

Question ID : 264330117597
Option 1 ID : 264330462414
Option 2 ID : 264330462416
Option 3 ID : 264330462415
Option 4 ID : 264330462413
Status : Answered
Chosen Option : 1

Q.47 What does 'F' stand for in FII?

- Ans
- 1. Fiduciary
 - 2. Foreign
 - 3. Fund
 - 4. Fast

Question ID : 26433059300
Option 1 ID : 264330232078
Option 2 ID : 264330232077
Option 3 ID : 264330232076
Option 4 ID : 264330232079
Status : Answered
Chosen Option : 2

Q.48 In despair because of the perpetuation of untouchability in Hindu doctrine, BR Ambedkar converted to _____.

- Ans
- 1. Islam
 - 2. Christianity
 - 3. Jainism
 - 4. Buddhism

Question ID : 264330119017
Option 1 ID : 264330466726
Option 2 ID : 264330466723
Option 3 ID : 264330466724
Option 4 ID : 264330466725
Status : Answered
Chosen Option : 2

Q.49 The rate of change of momentum of an object is proportional to the applied unbalanced force in the direction of force. This is known as:

- Ans
- 1. law of inertia
 - 2. first law of motion
 - 3. third law of motion
 - 4. second law of motion

Question ID : 264330169096
Option 1 ID : 264330663190
Option 2 ID : 264330663187
Option 3 ID : 264330663189
Option 4 ID : 264330663188
Status : Not Answered
Chosen Option : --

Q.50 Who among the following was an awardee of the prestigious National Nritya Shiromani Award 2022?

- Ans
- 1. VP Dhananjayan
 - 2. Aparna Satheesan
 - 3. ShanthaDhanajayan
 - 4. Alarmel Valli

Question ID : 26433074869
Option 1 ID : 264330293564
Option 2 ID : 264330293566
Option 3 ID : 264330293565
Option 4 ID : 264330293567
Status : Answered
Chosen Option : 4

Section : Reasoning

Q.1 Select the set in which the numbers are related in the same way as are the numbers of the following sets.

(NOTE : Operations should be performed on the whole numbers, without breaking down the numbers into its constituent digits. E.g. 13 – Operations on 13 such as adding /deleting /multiplying etc. to 13 can be performed. Breaking down 13 into 1 and 3 and then performing mathematical operations on 1 and 3 is not allowed.)

(32, 8, 72)
(56, 14, 126)

- Ans
- 1. (90, 23, 207)
 - 2. (92, 23, 209)
 - 3. (92, 21, 207)
 - 4. (92, 23, 207)

Question ID : 264330175037
Option 1 ID : 264330686523
Option 2 ID : 264330686525
Option 3 ID : 264330686524
Option 4 ID : 264330686526
Status : Answered
Chosen Option : 4

Q.2 Which figure should replace the question mark (?) if the series were to be continued?

9	↑	↑	S	3	↑	↑	9	
D	I	S	K	3	9	I	D	D
3	O	O	K	K	I	I	S	?

Ans

1.

I	S
↑	O 3 9
K	D
2.

I	↑
D K 3 O	
S	9
3.

9	D
↑	I 3 K
S	O
4.

K	↑
D I 3 9	
S	O

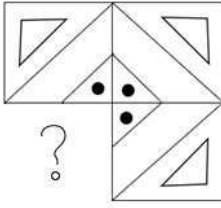
Question ID : 264330130799
 Option 1 ID : 264330512307
 Option 2 ID : 264330512308
 Option 3 ID : 264330512309
 Option 4 ID : 264330512310
 Status : Answered
 Chosen Option : 4

Q.3 Which of the following terms will replace the question mark (?) in the given series?
YUN, URL, QOJ, ?, IIF

1. MLH
 2. NLH
 3. NKI
 4. MKI

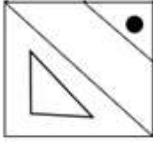
Question ID : 264330102181
 Option 1 ID : 264330401192
 Option 2 ID : 264330401189
 Option 3 ID : 264330401191
 Option 4 ID : 264330401190
 Status : Answered
 Chosen Option : 1

Q.4 Select the figure from the options that can replace the question mark (?) and complete the given pattern.

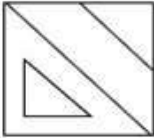


Ans

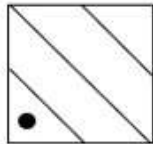
✓ 1.



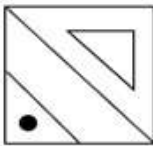
✗ 2.



✗ 3.



✗ 4.



Question ID : 26433083130

Option 1 ID : 264330326355

Option 2 ID : 264330326354

Option 3 ID : 264330326353

Option 4 ID : 264330326356

Status : Answered

Chosen Option : 1

Q.5 Which two signs should be interchanged to make the given equation correct?

$$76 - 8 \times 97 + 32 \div 8 = 515$$

Ans ✓ 1. \times and $-$

✗ 2. $+$ and \times

✗ 3. $+$ and $-$

✗ 4. $=$ and $+$

Question ID : 26433085732

Option 1 ID : 264330336630

Option 2 ID : 264330336632

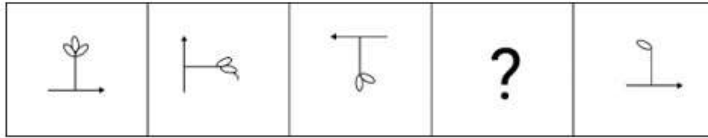
Option 3 ID : 264330336631

Option 4 ID : 264330336629

Status : Answered

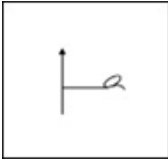
Chosen Option : 1

Q.6 Select the figure from among the given options that can replace the question mark (?) in the following series.

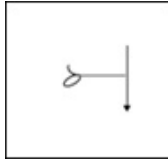


Ans

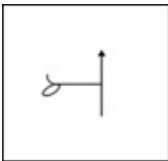
1.



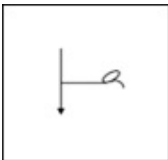
2.



3.



4.



Question ID : 264330110537

Option 1 ID : 264330434426

Option 2 ID : 264330434428

Option 3 ID : 264330434425

Option 4 ID : 264330434427

Status : Answered

Chosen Option : 2

Q.7 In a certain code language, 'LENGTH' is written as 'QVOTIS' and 'REGARD' is written as 'KVVZKW'. How will 'NATURE' be written as in that language?

Ans 1. OFJLPE

2. HBERPX

3. OZIFKV

4. HPELSH

Question ID : 26433082947

Option 1 ID : 264330325621

Option 2 ID : 264330325624

Option 3 ID : 264330325623

Option 4 ID : 264330325622

Status : Answered

Chosen Option : 3

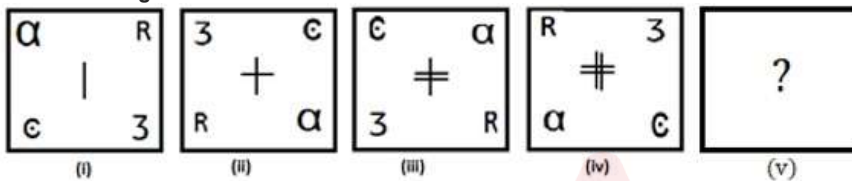
Q.8 Select the number from among the given options that can replace the question mark (?) in the following series.

1, 4, 10, 22, 46, ?

- Ans
- 1. 24
 - 2. 32
 - 3. 94
 - 4. 45

Question ID : 264330109758
 Option 1 ID : 264330431312
 Option 2 ID : 264330431310
 Option 3 ID : 264330431309
 Option 4 ID : 264330431311
 Status : Answered
 Chosen Option : 3

Q.9 Select the figure from among the given options that can replace the question mark (?) in the following series.

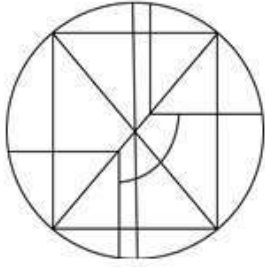


Ans

- 1.
- 2.
- 3.
- 4.

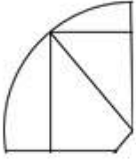
Question ID : 264330106549
 Option 1 ID : 264330418500
 Option 2 ID : 264330418497
 Option 3 ID : 264330418498
 Option 4 ID : 264330418499
 Status : Answered
 Chosen Option : 1

Q.10 Select the option that is embedded in the given figure (rotation is NOT allowed).



Ans

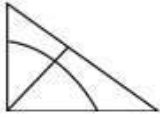
✓ 1.



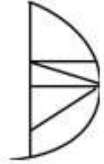
✗ 2.



✗ 3.



✗ 4.



Question ID : 264330106419

Option 1 ID : 264330417978

Option 2 ID : 264330417980

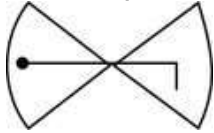
Option 3 ID : 264330417977

Option 4 ID : 264330417979

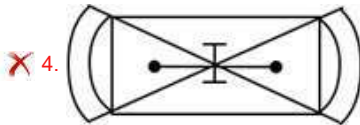
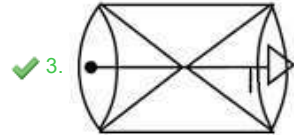
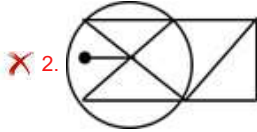
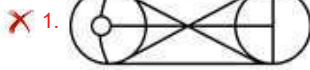
Status : Answered

Chosen Option : 1

Q.11 Select the option in which the given figure is embedded (rotation is NOT allowed).



Ans



Question ID : 264330116958

Option 1 ID : 264330459916

Option 2 ID : 264330459914

Option 3 ID : 264330459915

Option 4 ID : 264330459913

Status : Answered

Chosen Option : 3

Q.12 Select the correct mirror image of the given figure when the mirror is placed at MN as shown below.

S A H 7 B k v

M ————— N

Ans

✗ 1. v k B 7 H A 2

✓ 2. 2 A H 7 B k v

✗ 3. S A H 7 B k v

✗ 4. 2 A H 7 B k v

Question ID : 26433080787

Option 1 ID : 264330317084

Option 2 ID : 264330317082

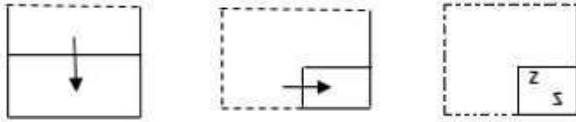
Option 3 ID : 264330317081

Option 4 ID : 264330317083

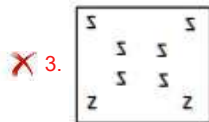
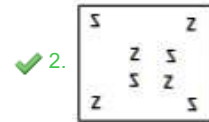
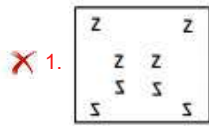
Status : Answered

Chosen Option : 2

Q.13 A paper is folded and cut as shown below. How will it appear when unfolded?



Ans



Question ID : 264330112594

Option 1 ID : 264330442462

Option 2 ID : 264330442464

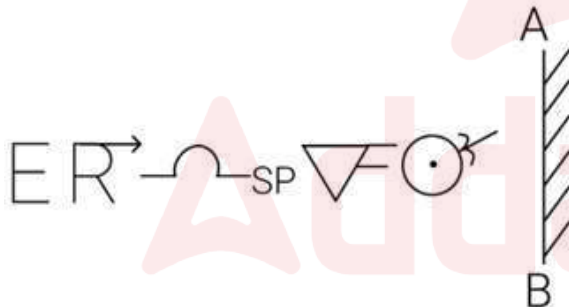
Option 3 ID : 264330442463

Option 4 ID : 264330442461

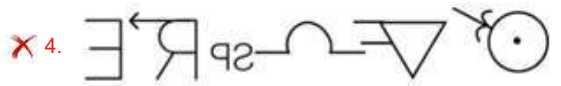
Status : Answered

Chosen Option : 2

Q.14 Select the correct mirror image of the given figure when the mirror is placed at 'AB' as shown.



Ans



Question ID : 264330114697

Option 1 ID : 264330450874

Option 2 ID : 264330450875

Option 3 ID : 264330450873

Option 4 ID : 264330450876

Status : Answered

Chosen Option : 2

Q.15 Three statements are given, followed by three conclusions numbered 1, 2 and 3. Assuming the statements to be true, even if they seem to be at variance with commonly known facts, decide which of the conclusions logically follow(s) from the statements.

Statements:

1. Some locks are keys.
2. Some keys are blades.
3. No blade is a gum.

Conclusions:

1. No gum is a key.
2. No blade is a lock.
3. Some keys are locks.

Ans 1. Only conclusion 3 follows

2. Only conclusions 1 and 3 follow

3. Only conclusions 2 and 3 follow

4. Only conclusions 1 and 2 follow

Question ID : 264330112572

Option 1 ID : 264330442374

Option 2 ID : 264330442376

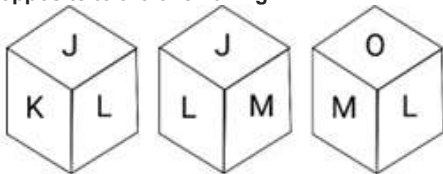
Option 3 ID : 264330442375

Option 4 ID : 264330442373

Status : Answered

Chosen Option : 1

Q.16 Six letters J, K, L, M, N and O are written on different faces of a dice. Three different positions of this dice are shown in the figure. Select the letter that will be on the face opposite to the one having N.



Ans 1. M

2. J

3. L

4. O

Question ID : 264330121789

Option 1 ID : 264330477329

Option 2 ID : 264330477327

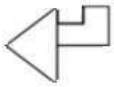
Option 3 ID : 264330477330

Option 4 ID : 264330477328

Status : Answered

Chosen Option : 3

Q.17 Select the option in which the given figure is embedded (rotation is NOT allowed).



Ans

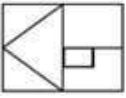
✓ 1.



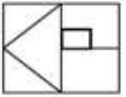
✗ 2.



✗ 3.



✗ 4.



Question ID : 264330101160

Option 1 ID : 264330397187

Option 2 ID : 264330397188

Option 3 ID : 264330397185

Option 4 ID : 264330397186

Status : Answered

Chosen Option : 1

Q.18 Select the correct combination of mathematical signs to replace the * signs and to balance the given equation.

$$111 * 87 * 78 * 3 * 25 * 2$$

Ans

✓ 1. - + + = ×

✗ 2. - + = × +

✗ 3. - + + × =

✗ 4. - + + × =

Question ID : 26433085720

Option 1 ID : 264330336583

Option 2 ID : 264330336584

Option 3 ID : 264330336581

Option 4 ID : 264330336582

Status : Answered

Chosen Option : 1

Q.19 Abhay, Bala, Chan, Dev, Emran, Fanny and Garry are 7 friends sitting around a circular table. Only five of them are facing the centre. Chan is sitting third to the left of Dev and both are facing the centre. Emran is the neighbour of neither Chan nor Dev. The one who is sitting exactly between Dev and Fanny is not facing the centre. Garry is sitting third to the right of Abhay and is facing the centre. One of the immediate neighbours of Bala is not facing the centre. Who is not sitting facing the centre?

Ans

✗ 1. Bala

✓ 2. Emran

✗ 3. Fanny

✗ 4. Chan

Question ID : 26433085629

Option 1 ID : 264330336217

Option 2 ID : 264330336220

Option 3 ID : 264330336219

Option 4 ID : 264330336218

Status : Answered

Chosen Option : 2

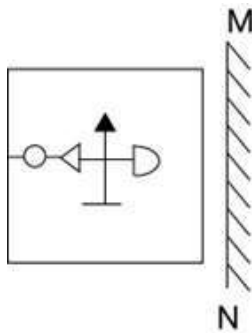
Q.20 Select the option that is related to the fourth number in the same way as the first number is related to the second number and the fifth number is related to the sixth number.

30 : 68 :: ? : 222 :: 10 : 30

- Ans
- 1. 125
 - 2. 130
 - 3. 150
 - 4. 149

Question ID : 26433051993
 Option 1 ID : 264330203274
 Option 2 ID : 264330203275
 Option 3 ID : 264330203276
 Option 4 ID : 264330203277
 Status : Not Answered
 Chosen Option : --

Q.21 Select the correct mirror image of the given combination when the mirror is placed at 'MN' as shown below.



Ans

- 1.
- 2.
- 3.
- 4.

Question ID : 264330130772
 Option 1 ID : 264330512199
 Option 2 ID : 264330512201
 Option 3 ID : 264330512200
 Option 4 ID : 264330512202
 Status : Answered
 Chosen Option : 2

Q.22 Select the correct mirror image of the given figure when the mirror is placed at PQ as shown below.

QWERTY#!@\$ 

Ans

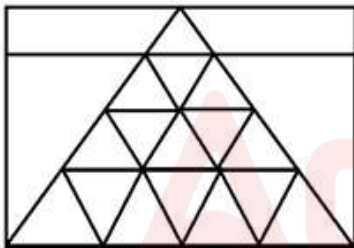
- 1. \$@#!#YTRM@
- 2. \$@#!#TYREW@
- 3. \$@#!#YTR@
- 4. \$@#!#YTR@

Question ID : 26433082032
 Option 1 ID : 264330321964
 Option 2 ID : 264330321963
 Option 3 ID : 264330321962
 Option 4 ID : 264330321961

Status : Answered

Chosen Option : 3

Q.23 How many triangles are there in the following figure?



Ans

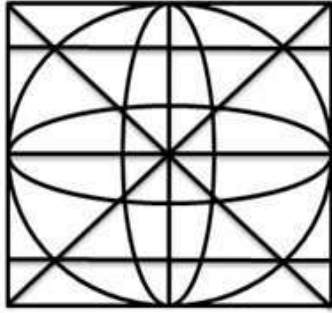
- 1. 31
- 2. 29
- 3. 27
- 4. 28

Question ID : 26433069253
 Option 1 ID : 264330271527
 Option 2 ID : 264330271525
 Option 3 ID : 264330271524
 Option 4 ID : 264330271526

Status : Answered

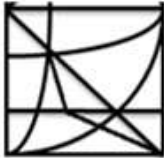
Chosen Option : 3

Q.24 Select the option figure that is embedded in the given figure. (Rotation is not allowed).

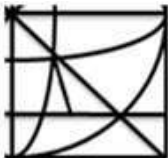


Ans

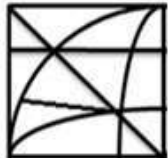
1.



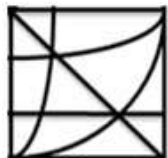
2.



3.



4.



Question ID : 264330114396

Option 1 ID : 264330449670

Option 2 ID : 264330449669

Option 3 ID : 264330449672

Option 4 ID : 264330449671

Status : Answered

Chosen Option : 4

Q.25 Select the word-pair that best represents a similar relationship to the one expressed in the pair of words given below.

(The words must be considered as meaningful English words and must not be related to each other based on the number of letters/number of consonants/vowels in the word.)

Apes : Shrewdness

Ans 1. Tree : Leaves

2. Bears : Sleuth

3. Skin : Man

4. Lion : Fur

Question ID : 26433053234

Option 1 ID : 264330208241

Option 2 ID : 264330208239

Option 3 ID : 264330208240

Option 4 ID : 264330208238

Status : Answered

Chosen Option : 2

Q.1 A loss of 25% gets converted into a profit of 12% when the selling price of an article is increased by ₹111. Find the cost price of the article.

- Ans
- 1. ₹290
 - 2. ₹300
 - 3. ₹295
 - 4. ₹305

Question ID : 264330119927
Option 1 ID : 264330469983
Option 2 ID : 264330469985
Option 3 ID : 264330469984
Option 4 ID : 264330469986
Status : Answered
Chosen Option : 2

Q.2 The length of a rectangle is increased by 70% and its breadth is decreased by 35%. What is the net percentage increase in its area?

- Ans
- 1. 14%
 - 2. 35%
 - 3. 17.5%
 - 4. 10.5%

Question ID : 264330103517
Option 1 ID : 264330406375
Option 2 ID : 264330406374
Option 3 ID : 264330406373
Option 4 ID : 264330406376
Status : Answered
Chosen Option : 4

Q.3 Under a scheme, a vendor is selling an article at a discount of 20% on the marked price; furthermore, he is offering a cash discount of ₹170. Now he is earning a profit of 10%. Determine the marked price of the article if its cost price is ₹1,300.

- Ans
- 1. ₹500
 - 2. ₹1,000
 - 3. ₹1,500
 - 4. ₹2,000

Question ID : 264330183841
Option 1 ID : 264330721040
Option 2 ID : 264330721041
Option 3 ID : 264330721042
Option 4 ID : 264330721043
Status : Answered
Chosen Option : 4

Q.4

Find the value of $4\frac{2}{3} + 3\frac{1}{5} - 1\frac{1}{5}$.

Ans

1. $5\frac{1}{3}$

2. $6\frac{2}{3}$

3. $6\frac{1}{4}$

4. $5\frac{1}{2}$

Question ID : 264330119326

Option 1 ID : 264330467591

Option 2 ID : 264330467593

Option 3 ID : 264330467592

Option 4 ID : 264330467594

Status : Answered

Chosen Option : 2

Q.5 What is the correct ascending order of the following ratios?

$\frac{8}{15}, \frac{19}{20}, \frac{23}{60}, \frac{27}{35}$

Ans

1. $\frac{8}{15} < \frac{23}{60} < \frac{27}{35} < \frac{19}{20}$

2. $\frac{23}{60} < \frac{8}{15} < \frac{19}{20} < \frac{27}{35}$

3. $\frac{23}{60} < \frac{8}{15} < \frac{27}{35} < \frac{19}{20}$

4. $\frac{23}{60} < \frac{27}{35} < \frac{8}{15} < \frac{19}{20}$

Question ID : 264330130672

Option 1 ID : 264330511801

Option 2 ID : 264330511799

Option 3 ID : 264330511800

Option 4 ID : 264330511802

Status : Answered

Chosen Option : 3

Q.6 If the base of a triangle is L cm, height is (4L+7) cm and sum of the base and height is 37 cm, then find the area of the triangle.

Ans

1. 82 cm^2

2. 75 cm^2

3. 93 cm^2

4. 105 cm^2

Question ID : 264330111487

Option 1 ID : 264330438034

Option 2 ID : 264330438033

Option 3 ID : 264330438035

Option 4 ID : 264330438036

Status : Answered

Chosen Option : 3

Q.7 A boat can travel at a speed of 13 km/h in still water. If the speed of the stream is 4 km/h, then the time taken by boat to go 63 km in the opposite direction to stream is:

- Ans
- 1. 6 hours
 - 2. 5 hours
 - 3. 9 hours
 - 4. 7 hours

Question ID : 264330168934
Option 1 ID : 264330662539
Option 2 ID : 264330662541
Option 3 ID : 264330662542
Option 4 ID : 264330662540
Status : Answered
Chosen Option : 4

Q.8 Find the average of the given numbers.
3, 7, 9, -5, 0.25, -3.75

- Ans
- 1. 10.5
 - 2. 2.625
 - 3. 4.67
 - 4. 1.75

Question ID : 264330112203
Option 1 ID : 264330440900
Option 2 ID : 264330440898
Option 3 ID : 264330440899
Option 4 ID : 264330440897
Status : Answered
Chosen Option : 4

Q.9 In how many years will ₹7,81,250 amount to ₹9,13,952 at 4% compound interest?

- Ans
- 1. 4
 - 2. 4.5
 - 3. 3
 - 4. 3.5

Question ID : 264330104260
Option 1 ID : 264330409342
Option 2 ID : 264330409344
Option 3 ID : 264330409341
Option 4 ID : 264330409343
Status : Answered
Chosen Option : 1

Q.10 If 42 workers earn ₹4,080 in 5 days, how much will 48 workers earn in 14 days?

- Ans
- 1. ₹13,056
 - 2. ₹13,198
 - 3. ₹6,528
 - 4. ₹6,128

Question ID : 264330182583
Option 1 ID : 264330716126
Option 2 ID : 264330716125
Option 3 ID : 264330716124
Option 4 ID : 264330716123
Status : Answered
Chosen Option : 1

Q.11 The ratio of income and expenditure is 9:5. Income increases by 40% and expenditure decreases by 10%. If the initial income is ₹45,000 then the final saving (in ₹) is:

- Ans
- 1. 40,500
 - 2. 40,000
 - 3. 35,000
 - 4. 41,000

Question ID : 264330129403
Option 1 ID : 264330506980
Option 2 ID : 264330506979
Option 3 ID : 264330506978
Option 4 ID : 264330506981
Status : Answered
Chosen Option : 1

Q.12 The ratio of two numbers is 16:19 and their least common multiple is 59280. What are the two numbers?

- Ans
- 1. 3120 and 3705
 - 2. 5345 and 2298
 - 3. 3750 and 2130
 - 4. 3175 and 2123

Question ID : 264330104336
Option 1 ID : 264330409648
Option 2 ID : 264330409645
Option 3 ID : 264330409647
Option 4 ID : 264330409646
Status : Answered
Chosen Option : 1

Q.13 Find the value of $\frac{1 + 0.000027}{1 - 0.03 + 0.0009}$.

- Ans
- 1. 1.05
 - 2. 1.07
 - 3. 1.08
 - 4. 1.03

Question ID : 264330106067
Option 1 ID : 264330416572
Option 2 ID : 264330416570
Option 3 ID : 264330416571
Option 4 ID : 264330416569
Status : Answered
Chosen Option : 4

Q.14 How long (in years) will it take a sum of money invested at 8% per annum on simple interest to increase its value by 40%?

- Ans 1. 5
 2. 3
 3. 6
 4. 7

Question ID : 264330119341
Option 1 ID : 264330467652
Option 2 ID : 264330467651
Option 3 ID : 264330467653
Option 4 ID : 264330467654
Status : Answered
Chosen Option : 1

Q.15 If each side of an equilateral triangle is increased by 80%, then by what percentage will the area increase?

- Ans 1. 120%
 2. 240%
 3. 238%
 4. 224%

Question ID : 264330119358
Option 1 ID : 264330467719
Option 2 ID : 264330467720
Option 3 ID : 264330467722
Option 4 ID : 264330467721
Status : Answered
Chosen Option : 4

Section : Computer Proficiency

Q.1 Which of the following is NOT a component of an email message?

- Ans 1. Ncc
 2. Cc
 3. To
 4. Subject

Question ID : 264330182021
Option 1 ID : 264330713926
Option 2 ID : 264330713925
Option 3 ID : 264330713923
Option 4 ID : 264330713924
Status : Answered
Chosen Option : 1

Q.2 In Microsoft Word 365, in which layout mode can we see how text and graphics will appear on the printed page?

- Ans
- 1. Normal Layout
 - 2. Quick Layout
 - 3. Print Layout
 - 4. Web Layout

Question ID : 264330182074
Option 1 ID : 264330714137
Option 2 ID : 264330714138
Option 3 ID : 264330714135
Option 4 ID : 264330714136
Status : Answered
Chosen Option : 3

Q.3 In MS-Word 365, which feature allows you to track and review changes made to a document, such as additions, deletions, and formatting modifications?

- Ans
- 1. Version History
 - 2. Track Changes
 - 3. AutoSave
 - 4. Spelling and Grammar Check

Question ID : 264330173353
Option 1 ID : 264330679893
Option 2 ID : 264330679892
Option 3 ID : 264330679891
Option 4 ID : 264330679894
Status : Answered
Chosen Option : 2

Q.4 Which of the following is an absolute cell reference in an MS Excel spreadsheet?

- Ans
- 1. \$A1
 - 2. A1
 - 3. A\$1
 - 4. \$A\$1

Question ID : 264330182114
Option 1 ID : 264330714298
Option 2 ID : 264330714295
Option 3 ID : 264330714297
Option 4 ID : 264330714296
Status : Answered
Chosen Option : 3

Q.5 Which pair of keyboard shortcuts is used for copying and pasting words in MS word 365?

- Ans
- 1. Ctrl + C and Ctrl + V
 - 2. Ctrl + C and Ctrl + S
 - 3. Ctrl + C and Ctrl + Z
 - 4. Ctrl + C and Ctrl + A

Question ID : 264330182065
Option 1 ID : 264330714099
Option 2 ID : 264330714101
Option 3 ID : 264330714102
Option 4 ID : 264330714100
Status : Answered
Chosen Option : 1

Q.6 If you are currently in Cell D4 in Microsoft Excel and you press the Enter key, to which cell will you move?

- Ans
- 1. You will go to Cell E4
 - 2. You will go to Cell D5
 - 3. You will go to Cell D3
 - 4. You will go to Cell C4

Question ID : 264330182044
Option 1 ID : 264330714018
Option 2 ID : 264330714015
Option 3 ID : 264330714017
Option 4 ID : 264330714016
Status : Answered
Chosen Option : 2

Q.7 Which of the following is the correct syntax to enter a Date in MS-Excel 365?

- Ans
- 1. =DATE(month,day,year)
 - 2. =DATE(year,day,month)
 - 3. =DATE(day,year,month)
 - 4. =DATE(year,month,day)

Question ID : 264330176695
Option 1 ID : 264330692996
Option 2 ID : 264330692995
Option 3 ID : 264330692998
Option 4 ID : 264330692997
Status : Answered
Chosen Option : 4

Q.8 What is the shortcut key for opening the documents in MS-Word 365?

- Ans
- 1. Ctrl + W
 - 2. Ctrl + B
 - 3. Ctrl + V
 - 4. Ctrl + O

Question ID : 264330171414
Option 1 ID : 264330672274
Option 2 ID : 264330672271
Option 3 ID : 264330672273
Option 4 ID : 264330672272
Status : Answered
Chosen Option : 4

Q.9 Which of the following methods is used to open word Processing package?

- Ans
- 1. File-> All Programs->Word Processor
 - 2. Start->All Programs->Microsoft Word
 - 3. Start->All Programs->Word Processor
 - 4. File-> All Programs->Microsoft Word

Question ID : 264330178292
Option 1 ID : 264330699225
Option 2 ID : 264330699224
Option 3 ID : 264330699226
Option 4 ID : 264330699223
Status : Answered
Chosen Option : 2

Q.10 Which internet protocol is responsible for assigning unique IP addresses to devices on a network and ensuring they can communicate with each other?

- Ans**
- 1. TCP (Transmission Control Protocol)
 - 2. HTTP (Hypertext Transfer Protocol)
 - 3. DNS (Domain Name System)
 - 4. DHCP (Dynamic Host Configuration Protocol)

Question ID : 264330173298

Option 1 ID : 264330679673

Option 2 ID : 264330679674

Option 3 ID : 264330679671

Option 4 ID : 264330679672

Status : Answered

Chosen Option : 1



Constable Executive Male and Female in Delhi Police Examination 2023

Roll Number	
Candidate Name	
Venue Name	Academy of Management Studies
Exam Date	24/11/2023
Exam Time	12:00 PM - 1:30 PM
Subject	Constable Executive Male and Female in Delhi Police Examination 2023

Section : **General Knowledge**

Q.1 The structural part of the Indian Constitution is derived from:

- Ans 1. Government of India Act 1919
 2. Government of India Act 1935
 3. Government of India Act 1909
 4. Government of India Act 1958

Question ID : 264330111508
Option 1 ID : 264330438119
Option 2 ID : 264330438120
Option 3 ID : 264330438118
Option 4 ID : 264330438117
Status : Answered
Chosen Option : 2

Q.2 Padma Shri awardee, Shivnath Mishra is an exponent of Benaras Gharana and he plays _____ styles of Benaras Gayaki Ang.

- Ans 1. Six
 2. Three
 3. Two
 4. Four

Question ID : 264330111955
Option 1 ID : 264330439906
Option 2 ID : 264330439905
Option 3 ID : 264330439908
Option 4 ID : 264330439907
Status : Answered
Chosen Option : 4

Q.3 What is the full form of NADA?

- Ans 1. National Age-Detecting Agency
 2. National Assessment and Development Agency
 3. National Athletes-Development Agency
 4. National Anti-Doping Agency

Question ID : 264330176142
Option 1 ID : 264330690865
Option 2 ID : 264330690866
Option 3 ID : 264330690863
Option 4 ID : 264330690864
Status : Answered
Chosen Option : 4

Q.4 What is the primary factor contributing to structural unemployment in India?

- Ans
- 1. Lack of education
 - 2. Seasonal variations
 - 3. Unavailability of jobs
 - 4. Technological advancements

Question ID : 264330179291
Option 1 ID : 264330703169
Option 2 ID : 264330703167
Option 3 ID : 264330703170
Option 4 ID : 264330703168
Status : Answered
Chosen Option : 4

Q.5 My times: An autobiography, is authored by whom among the following famous freedom fighters of India?

- Ans
- 1. Vinoba Bhave
 - 2. J B Kriplani
 - 3. Motilal Nehru
 - 4. C R Das

Question ID : 264330112861
Option 1 ID : 264330443530
Option 2 ID : 264330443529
Option 3 ID : 264330443532
Option 4 ID : 264330443531
Status : Answered
Chosen Option : 1

Q.6 The term 'bouncer' is used in which of the following games?

- Ans
- 1. Hockey
 - 2. Football
 - 3. Tennis
 - 4. Cricket

Question ID : 264330130645
Option 1 ID : 264330511693
Option 2 ID : 264330511692
Option 3 ID : 264330511694
Option 4 ID : 264330511691
Status : Answered
Chosen Option : 4

Q.7 Who of the following wrote 'Prithviraj Raso'?

- Ans
- 1. Rajasekhara
 - 2. Jaidev
 - 3. Chand Bardai
 - 4. Padmagupta

Question ID : 264330119958
Option 1 ID : 264330470108
Option 2 ID : 264330470110
Option 3 ID : 264330470109
Option 4 ID : 264330470107
Status : Answered
Chosen Option : 3

Q.8 Shovana Narayan an officer with the Indian Audit and Account Services, has won many awards for her contribution to the field of dance at the international level and has recently acted in a movie. She is an exponent of which of the following dance forms?

- Ans
- 1. Bharatanatyam
 - 2. Kathak
 - 3. Odissi
 - 4. Kuchipudi

Question ID : 26433071521
Option 1 ID : 264330280511
Option 2 ID : 264330280508
Option 3 ID : 264330280509
Option 4 ID : 264330280510
Status : Answered
Chosen Option : 2

Q.9 Article 76 of the Constitution of India provides for:

- Ans
- 1. Ombudsman
 - 2. Finance Commission Chairman
 - 3. Election Commissioner
 - 4. Attorney General

Question ID : 264330110811
Option 1 ID : 264330435523
Option 2 ID : 264330435524
Option 3 ID : 264330435521
Option 4 ID : 264330435522
Status : Answered
Chosen Option : 4

Q.10 Who among the following kings founded a suburban township near Vijayanagara called Nagalapuram?

- Ans
- 1. Deva Raya II
 - 2. Rajaraja Chola
 - 3. Rajendra I
 - 4. Krishnadevaraya

Question ID : 264330117686
Option 1 ID : 264330462742
Option 2 ID : 264330462741
Option 3 ID : 264330462740
Option 4 ID : 264330462739
Status : Answered
Chosen Option : 2

Q.11 During the British era India was an exporter of:

- Ans
- 1. capital goods
 - 2. industrial products
 - 3. Manufacturing products
 - 4. primary products

Question ID : 264330120889
Option 1 ID : 264330473774
Option 2 ID : 264330473772
Option 3 ID : 264330473773
Option 4 ID : 264330473771
Status : Answered
Chosen Option : 1

Q.12 In the game of discus throw what is the standard weight of a discus for women?

- Ans
- 1. 1500 gm
 - 2. 1000 gm
 - 3. 1200 gm
 - 4. 800 gm

Question ID : 264330118480
Option 1 ID : 264330465324
Option 2 ID : 264330465322
Option 3 ID : 264330465323
Option 4 ID : 264330465321
Status : Answered
Chosen Option : 4

Q.13 Which of the following is referred to as a relaxation of Government restrictions?

- Ans
- 1. Disinvestment
 - 2. Liberalisation
 - 3. Globalisation
 - 4. Privatisation

Question ID : 26433082173
Option 1 ID : 264330322526
Option 2 ID : 264330322525
Option 3 ID : 264330322527
Option 4 ID : 264330322528
Status : Answered
Chosen Option : 1

Q.14 In which of the following states of India is the Nokrek Biosphere Reserve located?

- Ans
- 1. Nagaland
 - 2. Meghalaya
 - 3. Karnataka
 - 4. Telangana

Question ID : 264330178014
Option 1 ID : 264330698131
Option 2 ID : 264330698132
Option 3 ID : 264330698133
Option 4 ID : 264330698134
Status : Answered
Chosen Option : 2

Q.15 Which of the following communities of Sikkim celebrates 'Sonam Lochar' as its New Year on the first day of the twelfth month in the lunar calendar?

- Ans
- 1. Kirat Khambu Rai
 - 2. Lepcha
 - 3. Tamang
 - 4. Gurung

Question ID : 264330106208
Option 1 ID : 264330417135
Option 2 ID : 264330417134
Option 3 ID : 264330417136
Option 4 ID : 264330417133
Status : Answered
Chosen Option : 2

Q.16 In the Commonwealth Games, 2022, India won _____ .

- Ans
- 1. 25 gold medals
 - 2. 22 gold medals
 - 3. 24 gold medals
 - 4. 23 gold medals

Question ID : 264330132521
Option 1 ID : 264330519182
Option 2 ID : 264330519179
Option 3 ID : 264330519181
Option 4 ID : 264330519180
Status : Answered
Chosen Option : 2

Q.17 Identify the precipitate formed when carbon dioxide gas is passed through lime water.

- Ans
- 1. Zinc carbonate
 - 2. Calcium oxide
 - 3. Sodium oxide
 - 4. Calcium carbonate

Question ID : 264330134892
Option 1 ID : 264330528506
Option 2 ID : 264330528503
Option 3 ID : 264330528505
Option 4 ID : 264330528504
Status : Answered
Chosen Option : 4

Q.18 Which Article of the Constitution of India mentions that the State shall, in particular, direct its policy towards securing equal pay for equal work for both, men and women?

- Ans
- 1. Article 30
 - 2. Article 37
 - 3. Article 39
 - 4. Article 33

Question ID : 264330180879
Option 1 ID : 264330709479
Option 2 ID : 264330709481
Option 3 ID : 264330709482
Option 4 ID : 264330709480
Status : Answered
Chosen Option : 3

Q.19 In which of the following years did the Muslim League demand Pakistan, a separate nation for Indian Muslims?

- Ans
- 1. 1932
 - 2. 1940
 - 3. 1937
 - 4. 1943

Question ID : 264330120258
Option 1 ID : 264330471290
Option 2 ID : 264330471289
Option 3 ID : 264330471288
Option 4 ID : 264330471287
Status : Answered
Chosen Option : 3

Q.20 Padmaja Reddy is a famous _____ classical dancer.

- Ans
- 1. Kathak
 - 2. Kathakali
 - 3. Kuchipudi
 - 4. Bharatnatyam

Question ID : 264330106195
Option 1 ID : 264330417083
Option 2 ID : 264330417084
Option 3 ID : 264330417082
Option 4 ID : 264330417081
Status : Answered
Chosen Option : 3

Q.21 The process of removing silica from soil is known as:

- Ans
- 1. salinisation
 - 2. polarisation
 - 3. leaching
 - 4. desilication

Question ID : 264330131743
Option 1 ID : 264330516071
Option 2 ID : 264330516074
Option 3 ID : 264330516073
Option 4 ID : 264330516072
Status : Answered
Chosen Option : 1

Q.22 Who is considered as the highest law officer in the country?

- Ans
- 1. Chief Election Commissioner
 - 2. Chairman of NITI AAYOG
 - 3. Attorney General of India
 - 4. Chief Justice of India

Question ID : 264330173509
Option 1 ID : 264330680517
Option 2 ID : 264330680515
Option 3 ID : 264330680516
Option 4 ID : 264330680518
Status : Answered
Chosen Option : 3

Q.23 Ponnayya, Vadivelu, Shivanandam and Chinnayya who were renowned as Tanjore Bandhu, were well-known exponents of which dance?

- Ans
- 1. Kuchipudi
 - 2. Kathakali
 - 3. Bharatnatyam
 - 4. Mohiniyattam

Question ID : 264330110441
Option 1 ID : 264330434043
Option 2 ID : 264330434041
Option 3 ID : 264330434044
Option 4 ID : 264330434042
Status : Answered
Chosen Option : 1

Q.24 Which dynasty's king was the first ruler to issue gold coins on a large scale in India?

- Ans
- 1. Shaka
 - 2. Unani
 - 3. Pahlava
 - 4. Kushan

Question ID : 264330119727
Option 1 ID : 264330469183
Option 2 ID : 264330469184
Option 3 ID : 264330469186
Option 4 ID : 264330469185
Status : Answered
Chosen Option : 1

Q.25 Which Article of the Constitution of India mentions that it shall be the duty of every citizen of India to protect and improve the natural environment including forests, lakes, rivers and wild life, and to have compassion for living creatures?

- Ans
- 1. 51A (b)
 - 2. 51A (j)
 - 3. 51A (g)
 - 4. 51A (e)

Question ID : 264330133055
Option 1 ID : 264330521273
Option 2 ID : 264330521272
Option 3 ID : 264330521274
Option 4 ID : 264330521271
Status : Answered
Chosen Option : 2

Q.26 Identify the artist who is NOT associated with the musical instrument sarangi.

- Ans
- 1. Pandit Ram Narayan
 - 2. Ustad Binda Khan
 - 3. Pandit Vishwa Mohan Bhat
 - 4. Shakoor Khan

Question ID : 264330111188
Option 1 ID : 264330436839
Option 2 ID : 264330436840
Option 3 ID : 264330436838
Option 4 ID : 264330436837
Status : Answered
Chosen Option : 3

Q.27 Which of the following schemes come under the Ministry of Commerce and Industry?

- Ans
- 1. Swachh Bharat Abhiyan
 - 2. National Digital Health Mission
 - 3. National Bal Swachhta
 - 4. Make in India

Question ID : 264330110014
Option 1 ID : 264330432333
Option 2 ID : 264330432335
Option 3 ID : 264330432334
Option 4 ID : 264330432336
Status : Answered
Chosen Option : 4

Q.28 Pandrethan temple of Srinagar is associated with which of the following religions?

- Ans
- 1. Hinduism
 - 2. Sikhism
 - 3. Jainism
 - 4. Buddhism

Question ID : 264330111858
Option 1 ID : 264330439517
Option 2 ID : 264330439520
Option 3 ID : 264330439519
Option 4 ID : 264330439518
Status : Answered
Chosen Option : 4

Q.29 The Charter Act of _____ suspended the monopoly of the East India Company over trade with India.

- Ans
- 1. 1973
 - 2. 1853
 - 3. 1833
 - 4. 1813

Question ID : 264330114851
Option 1 ID : 264330451492
Option 2 ID : 264330451491
Option 3 ID : 264330451489
Option 4 ID : 264330451490
Status : Answered
Chosen Option : 2

Q.30 In which of the following years was the Railway budget merged with the Union budget?

- Ans
- 1. 2015
 - 2. 2017
 - 3. 2012
 - 4. 2019

Question ID : 264330116489
Option 1 ID : 264330458042
Option 2 ID : 264330458043
Option 3 ID : 264330458041
Option 4 ID : 264330458044
Status : Answered
Chosen Option : 2

Q.31 Who among the following won the '66th Filmfare Award 2021 for Best Choreography' for the song Dil Bechara?

- Ans
- 1. Ganesh Acharya
 - 2. Prabhu Deva
 - 3. Farah Khan
 - 4. Remo D'Souza

Question ID : 264330130525
Option 1 ID : 264330511213
Option 2 ID : 264330511214
Option 3 ID : 264330511212
Option 4 ID : 264330511211
Status : Answered
Chosen Option : 2

Q.32 The process by which the mix of species and habitat in an area changes over time is called:

- Ans
- 1. ecological balance
 - 2. ecological degradation
 - 3. ecological succession
 - 4. ecological saturation

Question ID : 264330111901
Option 1 ID : 264330439689
Option 2 ID : 264330439692
Option 3 ID : 264330439691
Option 4 ID : 264330439690
Status : Answered
Chosen Option : 1

Q.33 Who is known as the 'Father of Microfinance'? He founded Grameen Bank to make small loans available to the poor.

- Ans
- 1. Amartya Sen
 - 2. Muhammad Yunus
 - 3. Mahatma Gandhi
 - 4. Mahub Haq

Question ID : 264330166886
Option 1 ID : 264330654581
Option 2 ID : 264330654582
Option 3 ID : 264330654580
Option 4 ID : 264330654579
Status : Answered
Chosen Option : 2

Q.34 Through which Constitution Amendment Act was Article 39A inserted into the Constitution of India?

- Ans
- 1. 48th Amendment Act
 - 2. 46th Amendment Act
 - 3. 44th Amendment Act
 - 4. 42nd Amendment Act

Question ID : 264330180880
Option 1 ID : 264330709486
Option 2 ID : 264330709485
Option 3 ID : 264330709484
Option 4 ID : 264330709483
Status : Answered
Chosen Option : 3

Q.35 Banganga Festival, held every year in the city of Mumbai, is a musical tribute to_____.

- Ans
- 1. Lord Brahma
 - 2. Lord Rama
 - 3. Lord Ganesh
 - 4. Lord Shiva

Question ID : 264330134254
Option 1 ID : 264330526014
Option 2 ID : 264330526012
Option 3 ID : 264330526011
Option 4 ID : 264330526013
Status : Answered
Chosen Option : 3

Q.36 Identify the group of crops that are associated with Kharif season in the northern states of India?

- Ans
- 1. Rice, Cotton, Bajra, Rapeseeds, Mustard
 - 2. Cotton, Bajra, Maize, Wheat, Gram
 - 3. Wheat, Gram, Rapeseeds, Mustard, Barley
 - 4. Rice, Cotton, Bajra, Maize, Jowar

Question ID : 264330120312
Option 1 ID : 264330471501
Option 2 ID : 264330471502
Option 3 ID : 264330471500
Option 4 ID : 264330471499
Status : Answered
Chosen Option : 1

Q.37 When was the Jan Dhan Yojana launched?

- Ans
- 1. 2015
 - 2. 2016
 - 3. 2013
 - 4. 2014

Question ID : 264330112497
Option 1 ID : 264330442075
Option 2 ID : 264330442076
Option 3 ID : 264330442073
Option 4 ID : 264330442074
Status : Answered
Chosen Option : 2

Q.38 Which of the following was co-founded by Subhas Chandra Bose?

- Ans 1. All India Forward Bloc
 2. All India Students Federation
 3. Kisan Majdoor Praja Party
 4. Congress Socialist Party

Question ID : 264330120429
Option 1 ID : 264330471967
Option 2 ID : 264330471968
Option 3 ID : 264330471970
Option 4 ID : 264330471969
Status : Answered
Chosen Option : 2

Q.39 In the states, No Demand for Grants can be made EXCEPT on the recommendation of the _____.

- Ans 1. Governor
 2. Chief Minister
 3. Finance Minister of the State
 4. President of India

Question ID : 264330120187
Option 1 ID : 264330471005
Option 2 ID : 264330471004
Option 3 ID : 264330471006
Option 4 ID : 264330471003
Status : Answered
Chosen Option : 1

Q.40 The famous Hindu Temple 'Koneswaram' is located in which country?

- Ans 1. Pakistan
 2. Nepal
 3. Bhutan
 4. Sri Lanka

Question ID : 264330120351
Option 1 ID : 264330471655
Option 2 ID : 264330471656
Option 3 ID : 264330471658
Option 4 ID : 264330471657
Status : Answered
Chosen Option : 2

Q.41 Which of the following statement is related to Koeppen's 'A' type of climate?

- Ans 1. Average temperature for all months is below 10°C
 2. Cold due to elevation
 3. Average temperature of the coldest month is 18°C or higher
 4. Possible evaporation is equal to precipitation

Question ID : 264330131109
Option 1 ID : 264330513548
Option 2 ID : 264330513550
Option 3 ID : 264330513549
Option 4 ID : 264330513547
Status : Answered
Chosen Option : 4

Q.42 'Maila Aanchal', one of the finest examples of regional novels is written by:

- Ans 1. Phanishwar Nath Renu
 2. Kamleshwar
 3. Kedar Nath Singh
 4. Munshi Premchand

Question ID : 26433064627
Option 1 ID : 264330253100
Option 2 ID : 264330253101
Option 3 ID : 264330253102
Option 4 ID : 264330253103
Status : Answered
Chosen Option : 1

Q.43 According to the Ministry of Fisheries, Animal Husbandry and Dairying, Government of India, what was India's rank in milk production in the world in 2022?

- Ans 1. First
 2. Third
 3. Fifth
 4. Second

Question ID : 264330138057
Option 1 ID : 264330540837
Option 2 ID : 264330540836
Option 3 ID : 264330540835
Option 4 ID : 264330540838
Status : Answered
Chosen Option : 1

Q.44 The lower portion of Dhamekh Stupa at Sarnath is covered with carved _____ .

- Ans 1. granite
 2. marble
 3. stone
 4. wood

Question ID : 264330106226
Option 1 ID : 264330417205
Option 2 ID : 264330417206
Option 3 ID : 264330417208
Option 4 ID : 264330417207
Status : Answered
Chosen Option : 1

Q.45 Who among the following Muslim leaders of British India joined the All-India Muslim League in 1913?

- Ans 1. Maulana Shaikat Ali
 2. Maulana Abul Kalam Azad
 3. Muhammad Ali Jinnah
 4. Hakim Ajmal Khan

Question ID : 264330113584
Option 1 ID : 264330446422
Option 2 ID : 264330446423
Option 3 ID : 264330446424
Option 4 ID : 264330446421
Status : Answered
Chosen Option : 3

Q.46 Which of the following committees was constituted in 1955 for village and small-scale industries?

- Ans
- 1. Kohli Committee
 - 2. Karve Committee
 - 3. Hussain Committee
 - 4. Nayak Committee

Question ID : 264330109394
Option 1 ID : 264330429856
Option 2 ID : 264330429853
Option 3 ID : 264330429855
Option 4 ID : 264330429854
Status : Answered
Chosen Option : 4

Q.47 Gorgonia ventalina is the scientific name of which saltwater invertebrate?

- Ans
- 1. Sea cucumber
 - 2. Sea urchin
 - 3. Common sea fan
 - 4. Sea anemone

Question ID : 264330130979
Option 1 ID : 264330513029
Option 2 ID : 264330513030
Option 3 ID : 264330513027
Option 4 ID : 264330513028
Status : Answered
Chosen Option : 1

Q.48 What was the capital of North-western province under Ashoka?

- Ans
- 1. Ujjayini
 - 2. Tosali
 - 3. Taxila
 - 4. Suvarnagiri

Question ID : 264330120280
Option 1 ID : 264330471371
Option 2 ID : 264330471372
Option 3 ID : 264330471374
Option 4 ID : 264330471373
Status : Answered
Chosen Option : 2

Q.49 According to the 2011 Census, which state has the least population in India?

- Ans
- 1. Sikkim
 - 2. Nagaland
 - 3. Tripura
 - 4. Arunachal Pradesh

Question ID : 264330130591
Option 1 ID : 264330511475
Option 2 ID : 264330511477
Option 3 ID : 264330511476
Option 4 ID : 264330511478
Status : Answered
Chosen Option : 2

Q.50 Consider the following statements and select the correct option.

A: All the objects must change from solids into liquids before changing into gases.

B: Evaporation is the process by which solids can change into gases.

- Ans**
- 1. A is false, but B is true
 - 2. Both A and B are true
 - 3. Both A and B are false
 - 4. A is true, but B is false

Question ID : 264330177023

Option 1 ID : 264330694287

Option 2 ID : 264330694290

Option 3 ID : 264330694289

Option 4 ID : 264330694288

Status : Answered

Chosen Option : 3

Section : Reasoning

Q.1 Select the correct combination of mathematical signs that can sequentially replace the * signs and balance the given equation.

$$20*60*40*20*10*0$$

- Ans**
- 1. +, -, ×, ÷, =
 - 2. +, ×, -, ÷, =
 - 3. +, ×, -, =, ÷, +
 - 4. ÷, -, ×, +, =

Question ID : 26433079095

Option 1 ID : 264330310387

Option 2 ID : 264330310384

Option 3 ID : 264330310386

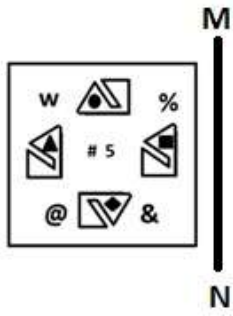
Option 4 ID : 264330310385

Status : Answered

Chosen Option : 1

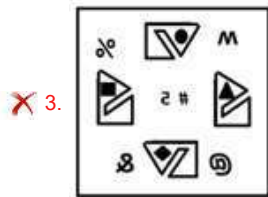
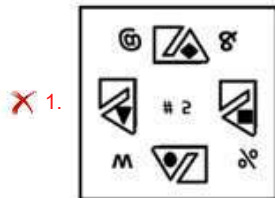
Adda247

Q.2 Select the correct mirror image of the given combination when the mirror is placed at 'MN' as shown below.



Problem figure:

Ans



Question ID : 264330122257

Option 1 ID : 264330479162

Option 2 ID : 264330479160

Option 3 ID : 264330479161

Option 4 ID : 264330479159

Status : Answered


Chosen Option : 4

Q.3 Which two signs should be interchanged to make the given equation correct?
 $144 \div 12 + 12 - 12 \times 12 = 1$

- Ans
- 1. = and \times
 - 2. + and -
 - 3. + and +
 - 4. \times and -

Question ID : 26433085731
Option 1 ID : 264330336625
Option 2 ID : 264330336626
Option 3 ID : 264330336627
Option 4 ID : 264330336628
Status : Answered
Chosen Option : 1

Q.4 Which of the following option figures will complete the pattern in the figure given below?



Ans

- 1.
- 2.
- 3.
- 4.

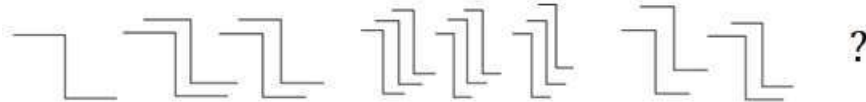
Question ID : 26433080613
Option 1 ID : 264330316386
Option 2 ID : 264330316387
Option 3 ID : 264330316385
Option 4 ID : 264330316388
Status : Answered
Chosen Option : 2

Q.5 Which of the following options will replace the question mark (?) in the given series?
43, 301, 236, 1652, 1587, ?, 11044

- Ans
- 1. 963
 - 2. 11109
 - 3. 1173
 - 4. 709

Question ID : 264330109431
Option 1 ID : 264330430003
Option 2 ID : 264330430001
Option 3 ID : 264330430004
Option 4 ID : 264330430002
Status : Answered
Chosen Option : 2

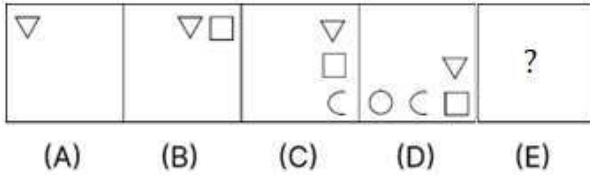
Q.6 Select the figure that will replace the question mark (?) in the following figure series.



- Ans
- 1.
 - 2.
 - 3.
 - 4.

Question ID : 264330112024
Option 1 ID : 264330440183
Option 2 ID : 264330440184
Option 3 ID : 264330440181
Option 4 ID : 264330440182
Status : Answered
Chosen Option : 4

Q.7 Given below is a series of figures – A, B, C and D which follow a particular pattern. Which of the given option figures should come in place of E to continue the series?



Ans

- ✗ 1.
- ✗ 2.
- ✗ 3.
- ✓ 4.

Question ID : 264330113644

Option 1 ID : 264330446662

Option 2 ID : 264330446663

Option 3 ID : 264330446661

Option 4 ID : 264330446664

Status : Answered

Chosen Option : 4

Q.8 Two statements are given, followed by three conclusions numbered I, II and III. Assuming the statements to be true, even if they seem to be at variance with commonly known facts, decide which of the conclusions logically follow(s) from the statements.

Statements:

All shrubs are trees.

Some plants are shrubs.

Conclusions:

I. All plants are trees.

II. Some trees are shrubs.

III. No plant is a tree.

- Ans
- ✗ 1. Only conclusions II and III follow
 - ✗ 2. Only conclusion III follows
 - ✓ 3. Only conclusion II follows
 - ✗ 4. Either conclusion I or III follows

Question ID : 26433068825

Option 1 ID : 264330269813

Option 2 ID : 264330269812

Option 3 ID : 264330269815

Option 4 ID : 264330269814

Status : Answered

Chosen Option : 3

Q.9 Which figure should replace the question mark (?) in the following series to continue the pattern?

□	8	↑	F	
8 ☆ F	Z 5 □	F 8 V	□ A ↑	?
Z V ↑	V ↑ F	□ 5 Z	5 Z V	

Ans

✗ 1.

A		
↑	Z	V
□	F	5

✗ 2.

5		
A	↑	Z
V	□	F

✗ 3.

Z		
5	F	□
V	A	↑

✓ 4.

Z		
V	F	5
↑	A	□

Question ID : 264330129627

Option 1 ID : 264330507875

Option 2 ID : 264330507877

Option 3 ID : 264330507874

Option 4 ID : 264330507876

Status : Answered

Chosen Option : 4

Q.10 In a certain code language, 'CODY' is written as 'CQDA' and 'DINO' is written as 'DKNQ'. How will 'RAIN' be written in that language?

Ans ✗ 1. PCIP

✓ 2. RCIP

✗ 3. RCPI

✗ 4. RPIC

Question ID : 26433087257

Option 1 ID : 264330342668

Option 2 ID : 264330342666


Option 3 ID : 264330342665

Option 4 ID : 264330342667

Status : Answered

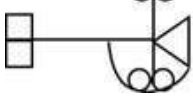
Chosen Option : 2

Q.11 Select the option in which the given figure is embedded (rotation is NOT allowed).

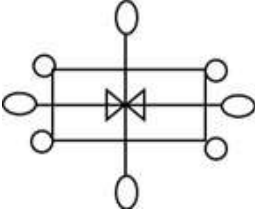


Ans

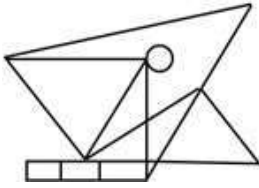
✓ 1.



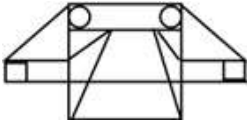
✗ 2.



✗ 3.



✗ 4.



Question ID : 264330172420

Option 1 ID : 264330676232

Option 2 ID : 264330676233

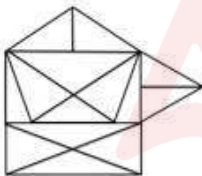
Option 3 ID : 264330676234

Option 4 ID : 264330676231

Status : Answered

Chosen Option : 1

Q.12 How many triangles are there in the figure given below?



Ans

✓ 1. 24

✗ 2. 22

✗ 3. 16

✗ 4. 20

Question ID : 26433085673

Option 1 ID : 264330336396

Option 2 ID : 264330336393

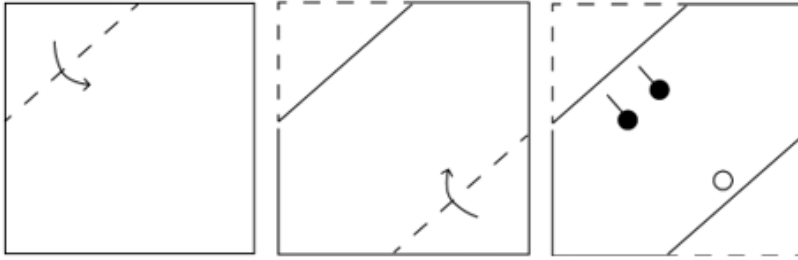
Option 3 ID : 264330336395

Option 4 ID : 264330336394

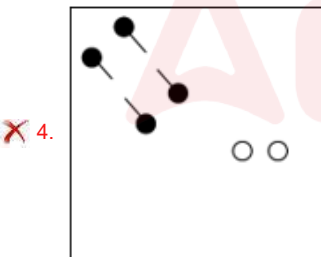
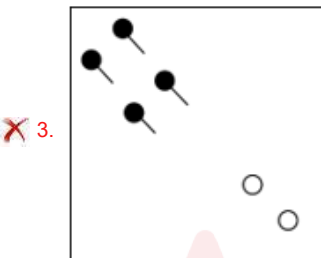
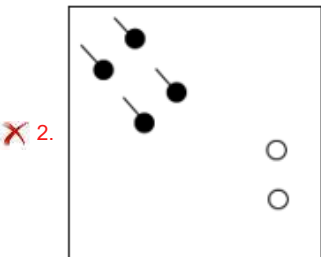
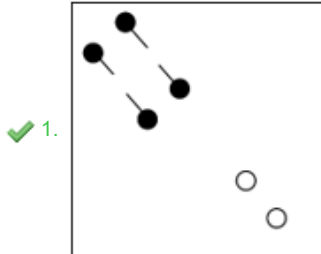
Status : Answered

Chosen Option : 1

Q.13 A square sheet of paper is folded along the dotted line successively along the directions shown and is then punched in the last. How would the paper look when unfolded?



Ans



Question ID : 264330172412

Option 1 ID : 264330676200

Option 2 ID : 264330676201

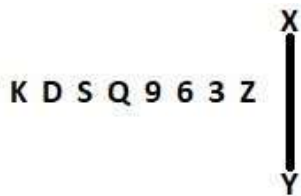
Option 3 ID : 264330676202

Option 4 ID : 264330676199

Status : Answered

Chosen Option : 1

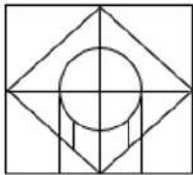
Q.14 Select the correct mirror image of the given combination when the mirror is placed at 'XY' as shown below.



- Ans
- 1. K D 2 0 a e 3 Z
 - 2. Z 3 6 9 Q S D K
 - 3. Z 3 6 9 Q S D K
 - 4. Z 3 e a 0 2 D K

Question ID : 264330129695
 Option 1 ID : 264330508147
 Option 2 ID : 264330508146
 Option 3 ID : 264330508148
 Option 4 ID : 264330508149
 Status : Answered
 Chosen Option : 2

Q.15 Select the option figure which is embedded in the given figure. (Rotation is NOT allowed).



- Ans
- 1.
 - 2.
 - 3.
 - 4.

Question ID : 26433085529
 Option 1 ID : 264330335818
 Option 2 ID : 264330335817
 Option 3 ID : 264330335819
 Option 4 ID : 264330335820
 Status : Answered
 Chosen Option : 1

Q.16 Select the set in which the numbers are related in the same way as are the numbers of the given sets.

(NOTE: Operations should be performed on the whole numbers, without breaking down the numbers into its constituent digits. E.g., 13 – Operations on 13 such as adding/ deleting/ multiplying etc. to 13 can be performed. Breaking down 13 into 1 and 3 and then performing mathematical operations on 1 and 3 is not allowed.

(101, 106, 111)

(214, 198, 182)

Ans 1. (123, 129, 133)

2. (89, 95, 99)

3. (78, 136, 190)

4. (163, 156, 149)

Question ID : 264330178751

Option 1 ID : 264330701033

Option 2 ID : 264330701031

Option 3 ID : 264330701032

Option 4 ID : 264330701034

Status : Answered

Chosen Option : 4

Q.17 Which of the following terms will replace the question mark (?) in the given series?
CYFW, GUIT, KQLQ, ?, SIRK

Ans 1. ONOM

2. PMON

3. PNON

4. OMON

Question ID : 264330102184

Option 1 ID : 264330401202

Option 2 ID : 264330401203

Option 3 ID : 264330401204

Option 4 ID : 264330401201

Status : Answered

Chosen Option : 4

Adda247

Q.18 Select the correct mirror image of the given figure when the mirror is placed at MN as shown below.



Ans

- 1. 96RGX
- 2. 96R9X
- 3. 96R9X
- 4. 96RGX

Question ID : 264330132126

Option 1 ID : 264330517600

Option 2 ID : 264330517602

Option 3 ID : 264330517601

Option 4 ID : 264330517599

Status : Answered

Chosen Option : 3

Adda247

Q.19 Which of the following option figures will complete the pattern in the figure given below?



Ans



Question ID : 26433080635

Option 1 ID : 264330316475

Option 2 ID : 264330316474

Option 3 ID : 264330316473

Option 4 ID : 264330316476

Status : Answered

Chosen Option : 1

Q.20 Select the option that is related to the fifth letter-cluster in the same way as the second letter-cluster is related to the first letter-cluster and the fourth letter-cluster is related to the third letter-cluster.

EDGE : CEBC :: ICON : LMAG :: KICK : ?

- Ans
- 1. IAGJ
 - 2. IAGI
 - 3. JAGJ
 - 4. IAHI

Question ID : 26433076458
Option 1 ID : 264330299896
Option 2 ID : 264330299899
Option 3 ID : 264330299898
Option 4 ID : 264330299897
Status : Answered
Chosen Option : 2

Q.21 O, P, Q, R, W and X are sitting around a circular table facing the centre. W sits second to the left of R. Q sits to the immediate left of W. O sits to the immediate left of X. Who sits to the immediate left of R?

- Ans
- 1. P
 - 2. O
 - 3. Q
 - 4. X

Question ID : 264330104023
Option 1 ID : 264330408394
Option 2 ID : 264330408393
Option 3 ID : 264330408395
Option 4 ID : 264330408396
Status : Answered
Chosen Option : 1

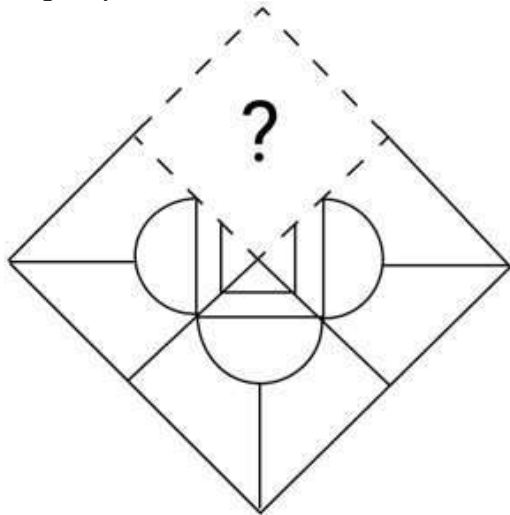
Q.22 Select the correct mirror image of the given figure when the mirror is placed at PQ as shown below.

&HGF%LOR! |
P
Q

- Ans
- 1. &RQAF%O!H
 - 2. &HG%FAOR!
 - 3. &HG%FLOR!
 - 4. &HGF%LOR!

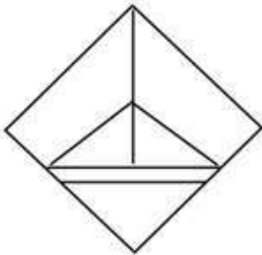
Question ID : 26433082019
Option 1 ID : 264330321912
Option 2 ID : 264330321911
Option 3 ID : 264330321909
Option 4 ID : 264330321910
Status : Answered
Chosen Option : 4

Q.23 Select the figure from the options that can replace the question mark (?) and complete the given pattern.

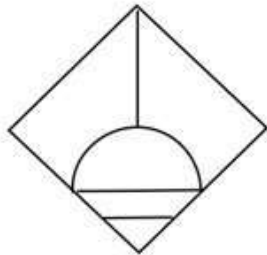


Ans

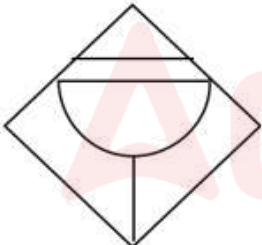
✗ 1.



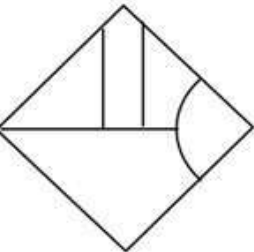
✓ 2.



✗ 3.



✗ 4.



Question ID : 264330106472
Option 1 ID : 264330418192
Option 2 ID : 264330418190
Option 3 ID : 264330418189
Option 4 ID : 264330418191
Status : Answered
Chosen Option : 2

Q.24 Select the correct mirror image of the given figure when the mirror is placed at MN as shown below.

V L M c 3 8 S

M ————— N

Ans

1. **Λ J W c 3 8 2**

2. **Λ Γ W c 3 8 2**

3. **Λ Γ W ρ 3 8 S**

4. **Λ Γ W c ε 8 2**

Question ID : 26433080792
Option 1 ID : 264330317101
Option 2 ID : 264330317104
Option 3 ID : 264330317103
Option 4 ID : 264330317102
Status : Answered
Chosen Option : 2

Q.25 Select the option that is related to the third term in the same way as the second term is related to the first term and the sixth term is related to the fifth term.
1278 : 1478 :: 1926 : ? :: 3798 : 3998

Ans

1. 2026

2. 1986

3. 1876

4. 2126

Question ID : 264330101051
Option 1 ID : 264330396751
Option 2 ID : 264330396749
Option 3 ID : 264330396750
Option 4 ID : 264330396752
Status : Answered
Chosen Option : 4

Section : Numerical Ability

Q.1 Which of the ratio is the smallest?

$$\frac{4}{5}, \frac{12}{14}, \frac{21}{23}, \frac{16}{19}, \frac{79}{85} = ?$$

- Ans
- 1. $\frac{16}{19}$
 - 2. $\frac{12}{14}$
 - 3. $\frac{79}{85}$
 - 4. $\frac{4}{5}$

Question ID : 264330130176

Option 1 ID : 264330509816

Option 2 ID : 264330509818

Option 3 ID : 264330509817

Option 4 ID : 264330509815

Status : Answered

Chosen Option : 4

Q.2 What is the result of the expression $4.5 \times 2.8 + 3.6 \times 2.5 - 1.7 \times 12$?
(Use decimal upto 1 point)

- Ans
- 1. 2.3
 - 2. 1.9
 - 3. 3.4
 - 4. 1.2

Question ID : 264330104343

Option 1 ID : 264330409674

Option 2 ID : 264330409673

Option 3 ID : 264330409676

Option 4 ID : 264330409675

Status : Answered

Chosen Option : 4

Q.3 The radius of the base and height of a solid right circular cylinder are in the ratio 7:3
and its volume is 12474 cm^3 . What is the total surface area of the cylinder?

(Use $\pi = \frac{22}{7}$)

- Ans
- 1. 1760 cm^2
 - 2. 2960 cm^2
 - 3. 3960 cm^2
 - 4. 2160 cm^2

Question ID : 264330119379

Option 1 ID : 264330467804

Option 2 ID : 264330467803

Option 3 ID : 264330467806

Option 4 ID : 264330467805

Status : Answered

Chosen Option : 3

Q.4 Ram received an annual salary of ₹48,580 in the year 2008. This was 25% more than his salary in 2007. What was his salary in 2007?

- Ans
- 1. ₹31,750
 - 2. ₹39,670
 - 3. ₹33,864
 - 4. ₹38,864

Question ID : 264330104292
Option 1 ID : 264330409471
Option 2 ID : 264330409469
Option 3 ID : 264330409472
Option 4 ID : 264330409470
Status : Answered
Chosen Option : 4

Q.5 The price of an article is reduced by 25% and its daily sale is increased by 30%. The net effect on the daily sale receipts is:

- Ans
- 1. $2\frac{1}{2}\%$ decrease
 - 2. 3% decrease
 - 3. $2\frac{1}{2}\%$ increase
 - 4. 3% increase

Question ID : 264330104161
Option 1 ID : 264330408945
Option 2 ID : 264330408947
Option 3 ID : 264330408946
Option 4 ID : 264330408948
Status : Answered
Chosen Option : 1

Q.6 If a person walked 14 km/h instead of 10 km/h, he would have walked 20 km more. The actual distance travelled by him is:

- Ans
- 1. 100 km
 - 2. 70 km
 - 3. 50 km
 - 4. 150 km

Question ID : 264330104529
Option 1 ID : 264330410417
Option 2 ID : 264330410420
Option 3 ID : 264330410419
Option 4 ID : 264330410418
Status : Answered
Chosen Option : 3

Q.7 Find the average of 72, 81, 90, 68, 61.

- Ans 1. 78.6
 2. 72.2
 3. 74.4
 4. 76.8

Question ID : 264330129385
Option 1 ID : 264330506908
Option 2 ID : 264330506906
Option 3 ID : 264330506909
Option 4 ID : 264330506907
Status : Answered
Chosen Option : 3

Q.8 Four years ago, the population of a city was 10,000. The annual growth rate of the population during the first two years was 20%. In the third and fourth years, there was a decrease in the population at the rate of 10% and 5%, respectively. What is the current population of the city after four years?

- Ans 1. 10500
 2. 14288
 3. 16632
 4. 12312

Question ID : 264330106666
Option 1 ID : 264330418965
Option 2 ID : 264330418967
Option 3 ID : 264330418966
Option 4 ID : 264330418968
Status : Answered
Chosen Option : 4

Q.9 8 men can complete a work in 6 hours. In how many hours can 12 men complete the same work?

- Ans 1. 4
 2. 6
 3. 5
 4. 3

Question ID : 264330182569
Option 1 ID : 264330716068
Option 2 ID : 264330716070
Option 3 ID : 264330716069
Option 4 ID : 264330716067
Status : Answered
Chosen Option : 1

Q.10 Lalita bought 10 water bottles for ₹18 each and sold them for ₹20 each. What is her overall profit percentage?

Ans

1. $13\frac{2}{9}\%$

2. 11%

3. $11\frac{1}{9}\%$

4. 13%

Question ID : 264330103950

Option 1 ID : 264330408101

Option 2 ID : 264330408104

Option 3 ID : 264330408102

Option 4 ID : 264330408103

Status : Answered

Chosen Option : 3

Q.11 The market price of a toy is 25% above the cost price. If the shopkeeper gives 12% discount, then find the gain in the deal.

Ans 1. 12%

2. 10%

3. 15%

4. 13%

Question ID : 264330122072

Option 1 ID : 264330478423

Option 2 ID : 264330478425

Option 3 ID : 264330478424

Option 4 ID : 264330478426

Status : Answered

Chosen Option : 2

Q.12 What is the difference between the total surface area and the curved surface area of a hemisphere (in cm^2) when the radius is 21 cm? (Take $\pi = \frac{22}{7}$)

Ans 1. 1386

2. 1495

3. 1586

4. 1376

Question ID : 264330112237

Option 1 ID : 264330441035

Option 2 ID : 264330441033

Option 3 ID : 264330441034

Option 4 ID : 264330441036

Status : Answered

Chosen Option : 1

Q.13 An amount of ₹4,000 was divided into two parts in such a way that, when the first part was invested at 3% per annum simple interest and the second at 5% per annum simple interest, the total annual interest from both the investments was ₹144. How much was put at 3% per annum simple interest?

- Ans**
- 1. ₹2,100
 - 2. ₹1,400
 - 3. ₹2,800
 - 4. ₹700

Question ID : 264330182532
Option 1 ID : 264330715921
Option 2 ID : 264330715920
Option 3 ID : 264330715922
Option 4 ID : 264330715919
Status : Answered
Chosen Option : 3

Q.14 What is the difference between the smallest and the largest prime numbers between 1 to 100?

- Ans**
- 1. 95
 - 2. 94
 - 3. 87
 - 4. 86

Question ID : 264330106073
Option 1 ID : 264330416596
Option 2 ID : 264330416595
Option 3 ID : 264330416594
Option 4 ID : 264330416593
Status : Answered
Chosen Option : 1

Q.15 The smallest four-digit number which is divisible by 15, 25, 40 and 75 is:

- Ans**
- 1. 1080
 - 2. 1120
 - 3. 1100
 - 4. 1200

Question ID : 264330119384
Option 1 ID : 264330467824
Option 2 ID : 264330467825
Option 3 ID : 264330467826
Option 4 ID : 264330467823
Status : Answered
Chosen Option : 4

Q.1 In Microsoft Word 365, what does paragraph formatting primarily control?

- Ans
- 1. Font style and colour
 - 2. Document headers and footers
 - 3. Line spacing and alignment
 - 4. Page layout and margins

Question ID : 264330180709
Option 1 ID : 264330708804
Option 2 ID : 264330708806
Option 3 ID : 264330708805
Option 4 ID : 264330708803
Status : Answered
Chosen Option : 4

Q.2 How can we combine names and addresses with a standard document in Microsoft Word 365?

- Ans
- 1. Mail Merge
 - 2. Mail Formatting
 - 3. Document Merge
 - 4. Document Formatting

Question ID : 264330182079
Option 1 ID : 264330714155
Option 2 ID : 264330714158
Option 3 ID : 264330714157
Option 4 ID : 264330714156
Status : Answered
Chosen Option : 4

Q.3 In MS Excel 365 , which of the following keyboard shortcuts will open the 'Open' dialog box, where you can navigate to the location of a spreadsheet file and open it?

- Ans
- 1. Alt + O
 - 2. Shift + Alt + O
 - 3. Ctrl + O
 - 4. Ctrl + Shift + O

Question ID : 264330180812
Option 1 ID : 264330709212
Option 2 ID : 264330709213
Option 3 ID : 264330709211
Option 4 ID : 264330709214
Status : Answered
Chosen Option : 3

Q.4 Which of the following signs is always the first part of the formula followed by an expression that calculates a value in MS-Excel 365?

- Ans
- 1. / (Division)
 - 2. - (Subtraction)
 - 3. = (Equal to)
 - 4. + (Addition)

Question ID : 264330176690
Option 1 ID : 264330692978
Option 2 ID : 264330692977
Option 3 ID : 264330692975
Option 4 ID : 264330692976
Status : Answered
Chosen Option : 3

Q.5 Which of the following shortcut keys is used to perform right alignment in MS Word 365?

- Ans
- 1. Ctrl + L
 - 2. Ctrl + Shift + >
 - 3. Ctrl + Shift + <
 - 4. Ctrl + R

Question ID : 264330180446
Option 1 ID : 264330707754
Option 2 ID : 264330707751
Option 3 ID : 264330707752
Option 4 ID : 264330707753
Status : Answered
Chosen Option : 4

Q.6 Which of the following is an email client offered by Microsoft?

- Ans
- 1. Thunderbird
 - 2. Gmail
 - 3. Apple
 - 4. Outlook

Question ID : 264330178242
Option 1 ID : 264330699024
Option 2 ID : 264330699026
Option 3 ID : 264330699025
Option 4 ID : 264330699023
Status : Answered
Chosen Option : 4

Q.7 Which of the following in communication of internet is a process of transferring real-time messages between users that facilitates private chat room atmosphere?

- Ans
- 1. Collaboration
 - 2. Remote access
 - 3. File sharing
 - 4. Instant messaging

Question ID : 264330182766
Option 1 ID : 264330716835
Option 2 ID : 264330716837
Option 3 ID : 264330716838
Option 4 ID : 264330716836
Status : Answered
Chosen Option : 4

Q.8 In MS Excel 365, how can a full name in MS-Excel 365 be split into separate first name and last name columns?

- Ans
- 1. Using the TEXT function
 - 2. Using the CONCATENATE function
 - 3. Using the Data Validation feature
 - 4. Using the Text to Columns feature

Question ID : 264330173574
Option 1 ID : 264330680776
Option 2 ID : 264330680775
Option 3 ID : 264330680777
Option 4 ID : 264330680778
Status : Answered
Chosen Option : 1

Q.9 In MS word 365. Which of the following menus has icons to Add Text, Update A Table, Insert Footnote, and Index in the Word Processing Package?

- Ans**
- 1. Page Layout
 - 2. References
 - 3. Mailings
 - 4. Design

Question ID : 264330175986
Option 1 ID : 264330690239
Option 2 ID : 264330690242
Option 3 ID : 264330690240
Option 4 ID : 264330690241
Status : Answered
Chosen Option : 1

Q.10 Which button in the Home tab of Microsoft Word 365 can be used to cut selected text?

- Ans**
- 1. Clipboard icon
 - 2. Scissors icon
 - 3. Arrow pointing down icon
 - 4. Double sheets of paper icon

Question ID : 264330173597
Option 1 ID : 264330680868
Option 2 ID : 264330680867
Option 3 ID : 264330680869
Option 4 ID : 264330680870
Status : Answered
Chosen Option : 2

Adda247

Constable Executive Male and Female in Delhi Police Examination 2023

Roll Number	
Candidate Name	
Venue Name	ION Digital Zone Phulwarisharif
Exam Date	24/11/2023
Exam Time	3:00 PM - 4:30 PM
Subject	Constable Executive Male and Female in Delhi Police Examination 2023

Section : General Knowledge

Q.1 In which year did Anil Kumble take 10 wickets in a cricket test match?

- Ans
- 1. 1987
 - 2. 1986
 - 3. 1998
 - 4. 1999

Question ID : 264330119277
Option 1 ID : 264330467398
Option 2 ID : 264330467396
Option 3 ID : 264330467395
Option 4 ID : 264330467397
Status : Answered
Chosen Option : 4

Q.2 In which city of Maharashtra is Kalidasa Festival organised every year?

- Ans
- 1. Nasik
 - 2. Nagpur
 - 3. Pune
 - 4. Mumbai

Question ID : 264330109627
Option 1 ID : 264330430787
Option 2 ID : 264330430786
Option 3 ID : 264330430788
Option 4 ID : 264330430785
Status : Answered
Chosen Option : 1

Q.3 As per Article 170 of the Constitution of India, the Legislative Assembly of each State shall consist of NOT more than _____ members.

- Ans
- 1. 500
 - 2. 450
 - 3. 300
 - 4. 250

Question ID : 26433053631
Option 1 ID : 264330209826
Option 2 ID : 264330209827
Option 3 ID : 264330209828
Option 4 ID : 264330209829
Status : Answered
Chosen Option : 4

Q.4 Who appoints the Attorney-General of India?

- Ans
- 1. Chief Minister
 - 2. Governor
 - 3. Prime Minister
 - 4. President

Question ID : 264330169048
Option 1 ID : 264330662998
Option 2 ID : 264330662997
Option 3 ID : 264330662995
Option 4 ID : 264330662996
Status : Answered
Chosen Option : 4

Q.5 Which Indian cricketer has written the book 'The Test of My Life'?

- Ans
- 1. Yuvraj Singh
 - 2. MS Dhoni
 - 3. Sachin Tendulkar
 - 4. Kapil Dev

Question ID : 26433055352
Option 1 ID : 264330216394
Option 2 ID : 264330216393
Option 3 ID : 264330216392
Option 4 ID : 264330216395
Status : Answered
Chosen Option : 3

Q.6 Which of the following is a negative impact of globalisation on Indian economy?

- Ans
- 1. Rise of straight-jacketed approach to leadership styles
 - 2. Rise in female participation in employment
 - 3. Rise in relative deprivation
 - 4. Loss of child labour

Question ID : 264330112492
Option 1 ID : 264330442053
Option 2 ID : 264330442055
Option 3 ID : 264330442054
Option 4 ID : 264330442056
Status : Answered
Chosen Option : 3

Q.7 According to the National Jute Board 2022-23, which state is the largest producer of jute?

- Ans
- 1. Madhya Pradesh
 - 2. Bihar
 - 3. Gujarat
 - 4. West Bengal

Question ID : 264330173608
Option 1 ID : 264330680914
Option 2 ID : 264330680913
Option 3 ID : 264330680912
Option 4 ID : 264330680911
Status : Answered
Chosen Option : 4

Q.8 The density of population in India (Census 2011) is _____ persons per sq km.

- Ans
- 1. 296
 - 2. 357
 - 3. 382
 - 4. 284

Question ID : 264330177907
Option 1 ID : 264330697716
Option 2 ID : 264330697717
Option 3 ID : 264330697718
Option 4 ID : 264330697715
Status : Answered
Chosen Option : 3

Q.9 Which of the following is/are correct about curd formation?

Statement 1.

The bacteria present in milk breakdown lactose into lactic acid.

Statement 2.

Production of lactic acid reduces the pH of the milk, coagulating it to form curd.

Statement 3.

Curd and yoghurt are the synonyms and their texture and taste is exactly same.

- Ans
- 1. Only statements 1 and 2 are correct
 - 2. Only statement 1 is correct
 - 3. All statements 1, 2 and 3 are correct
 - 4. Only statement 3 is correct

Question ID : 264330134275
Option 1 ID : 264330526097
Option 2 ID : 264330526095
Option 3 ID : 264330526096
Option 4 ID : 264330526098
Status : Answered
Chosen Option : 3

Q.10 Which of the following rivers passes through the maximum number of states in India?

- Ans
- 1. Damodar
 - 2. Indus
 - 3. Ganga
 - 4. Mahanadi

Question ID : 264330179020
Option 1 ID : 264330702084
Option 2 ID : 264330702086
Option 3 ID : 264330702083
Option 4 ID : 264330702085
Status : Answered
Chosen Option : 3

Q.11 The correct order of percentage of gases in atmosphere is:

- Ans 1. $N_2 > O_2 > Ar > CO_2$
 2. $N_2 > O_2 > CO_2 > Ar$
 3. $N_2 > Ar > O_2 > CO_2$
 4. $O_2 > N_2 > Ar > CO_2$

Question ID : 264330120076
Option 1 ID : 264330470559
Option 2 ID : 264330470560
Option 3 ID : 264330470561
Option 4 ID : 264330470562
Status : Answered
Chosen Option : 1

Q.12 Who led the Young Bengal Movement?

- Ans 1. Henry Vivian Derozio
 2. Raja Ram Mohan Roy
 3. Keshav Chandra Sen
 4. Devendra Nath Tagore

Question ID : 264330120307
Option 1 ID : 264330471480
Option 2 ID : 264330471481
Option 3 ID : 264330471482
Option 4 ID : 264330471479
Status : Answered
Chosen Option : 4

Q.13 Select the INCORRECT pair of festival and the respective state.

- Ans 1. Chhath Puja – Bihar
 2. Maghi – Himachal Pradesh
 3. Dang Darbar – Gujarat
 4. Sarhul – Tamil Nadu

Question ID : 264330118491
Option 1 ID : 264330465365
Option 2 ID : 264330465367
Option 3 ID : 264330465368
Option 4 ID : 264330465366
Status : Answered
Chosen Option : 4

Q.14 Which of the following books was written by Kautilya, Prime Minister of Chandragupta Maurya?

- Ans 1. Bhagavati Sutra
 2. Arthashastra
 3. Anguttara Nikaya
 4. Purva Mimamsa Sutras

Question ID : 264330120240
Option 1 ID : 264330471215
Option 2 ID : 264330471217
Option 3 ID : 264330471216
Option 4 ID : 264330471218
Status : Answered
Chosen Option : 2

Q.15 Which of the following pairs is INCORRECT?

- Ans
- 1. Part III – Fundamental Rights
 - 2. Part I – The Union and its Territory
 - 3. Part VIII – The Union Territories
 - 4. Part II – Fundamental Duties

Question ID : 264330110784
Option 1 ID : 264330435413
Option 2 ID : 264330435415
Option 3 ID : 264330435416
Option 4 ID : 264330435414
Status : Answered
Chosen Option : 4

Q.16 Which of the following is NOT a major jute producing state in India?

- Ans
- 1. Meghalaya
 - 2. West Bengal
 - 3. Telangana
 - 4. Assam

Question ID : 264330119776
Option 1 ID : 264330469380
Option 2 ID : 264330469379
Option 3 ID : 264330469382
Option 4 ID : 264330469381
Status : Answered
Chosen Option : 3

Q.17 Whose name among the following is associated with the second five-year plan?

- Ans
- 1. Jayanta Kumar Ghosh
 - 2. Kantilal Mardia
 - 3. Debabrata Basu
 - 4. Prasanta Chandra Mahalanobis

Question ID : 264330116519
Option 1 ID : 264330458164
Option 2 ID : 264330458162
Option 3 ID : 264330458163
Option 4 ID : 264330458161
Status : Answered
Chosen Option : 4

Q.18 'Permanent Settlement' in Bengal was started by which of the following Governor-Generals?

- Ans
- 1. Lord Minto
 - 2. Thomas Munro
 - 3. Alexander Reed
 - 4. Lord Cornwallis

Question ID : 264330114853
Option 1 ID : 264330451500
Option 2 ID : 264330451497
Option 3 ID : 264330451499
Option 4 ID : 264330451498
Status : Answered
Chosen Option : 4

Q.19 The term 'Protozoa' was coined by _____.

- Ans 1. Goldfuss
 2. Robert Grant
 3. Lamarck
 4. Charles Darwin

Question ID : 264330117588
Option 1 ID : 264330462379
Option 2 ID : 264330462380
Option 3 ID : 264330462377
Option 4 ID : 264330462378
Status : Answered
Chosen Option : 3

Q.20 Identify the artist who popularised the guitar as an instrument in Indian classical music.

- Ans 1. N Ramani
 2. Sandeep Das
 3. EM Subramaniam
 4. Brij Bhushan Kabra

Question ID : 264330111191
Option 1 ID : 264330436850
Option 2 ID : 264330436851
Option 3 ID : 264330436852
Option 4 ID : 264330436849
Status : Answered
Chosen Option : 3

Q.21 PMJJBY (Pradhan Mantri Jeevan Jyoti Bima Yojana) scheme is a type of ___.

- Ans 1. life insurance scheme
 2. AD&D scheme
 3. pension scheme
 4. loan scheme

Question ID : 264330110187
Option 1 ID : 264330433026
Option 2 ID : 264330433025
Option 3 ID : 264330433027
Option 4 ID : 264330433028
Status : Answered
Chosen Option : 1

Q.22 Who among the following is associated with Kathakali?

- Ans 1. Sujata Mohapatra
 2. Kalamandalam Krishnan Nair
 3. Swapana Sundari
 4. Kaushalya Reddy

Question ID : 264330131311
Option 1 ID : 264330514358
Option 2 ID : 264330514357
Option 3 ID : 264330514356
Option 4 ID : 264330514355
Status : Answered
Chosen Option : 2

Q.23 Dollu Kunitha, a high energy popular folk dance of Karnataka region is primarily performed for which of the following deities?

- Ans
- 1. Lord Shiva
 - 2. Lord Rama
 - 3. Lord Vishnu
 - 4. Lord Krishna

Question ID : 264330110435
Option 1 ID : 264330434018
Option 2 ID : 264330434019
Option 3 ID : 264330434017
Option 4 ID : 264330434020
Status : Answered
Chosen Option : 1

Q.24 The garbhagriha and shikhara are made in a Rekha-Prasada or Latina style and the mandapa of an old form of wooden architecture. These features of temple architecture are present in which part of India?

- Ans
- 1. Western
 - 2. Northern
 - 3. Southern
 - 4. Eastern

Question ID : 264330106255
Option 1 ID : 264330417322
Option 2 ID : 264330417324
Option 3 ID : 264330417321
Option 4 ID : 264330417323
Status : Answered
Chosen Option : 3

Q.25 Consider the given the values and answer the question that follows.

GNP at market prices = ₹15,50,113 crore

Indirect taxes = ₹1,75,386 crore

Subsidies = ₹38,504

Net factor income from abroad = (-) ₹13,439

What will be the value of GDP at factor cost?

- Ans
- 1. ₹13,99,792
 - 2. ₹14,13,231
 - 3. ₹17,00,434
 - 4. ₹14,26,670

Question ID : 264330119671
Option 1 ID : 264330468961
Option 2 ID : 264330468959
Option 3 ID : 264330468960
Option 4 ID : 264330468962
Status : Answered
Chosen Option : 3

Q.26 Which of the following is not correct about Article 19 of the Indian Constitution?

- Ans
- 1. All citizens shall have the right to form associations or unions.
 - 2. All citizens shall have the right to assemble peaceably and without arms.
 - 3. All citizens shall have the right to move freely outside the territory of India.
 - 4. All citizens shall have the right to freedom of speech and expression.

Question ID : 264330180047
Option 1 ID : 264330706173
Option 2 ID : 264330706172
Option 3 ID : 264330706174
Option 4 ID : 264330706171
Status : Answered
Chosen Option : 3

Q.27 Name the popular dance of North-West India in which dancers balance multiple pots or pitchers on their head while standing on top of glass bottles or on the rim of a brass plate.

- Ans
- 1. Bhavai
 - 2. Ghoomar
 - 3. Garba
 - 4. Tera Tali

Question ID : 264330110421
Option 1 ID : 264330433962
Option 2 ID : 264330433963
Option 3 ID : 264330433961
Option 4 ID : 264330433964
Status : Answered
Chosen Option : 2

Q.28 Who was known as the 'Frontier Gandhi of India' and was the leader of North West Frontier province of British India?

- Ans
- 1. Mahatma Gandhi
 - 2. Jawaharlal Nehru
 - 3. Subhash Chandra Bose
 - 4. Khan Abdul Gaffar Khan

Question ID : 264330123749
Option 1 ID : 264330485033
Option 2 ID : 264330485034
Option 3 ID : 264330485032
Option 4 ID : 264330485031
Status : Answered
Chosen Option : 4

Q.29 Which of the following equations correctly measures national income by expenditure method?

- Ans
- 1. $Y = C + I + G - X + M$
 - 2. $Y = C + I + G + X + M$
 - 3. $Y = C + I + G + X - M$
 - 4. $Y = C - I + G + X - M$

Question ID : 264330120882
Option 1 ID : 264330473744
Option 2 ID : 264330473743
Option 3 ID : 264330473745
Option 4 ID : 264330473746
Status : Not Answered
Chosen Option : --

Q.30 In which of following Yajnas was a horse let loose to wander freely and guarded by the raja's men in ancient India?

- Ans
- 1. Ashvadhari Yajna
 - 2. Narmedha Yajna
 - 3. Brahma Yajna
 - 4. Ashvamedha Yajna

Question ID : 264330183092
Option 1 ID : 264330718103
Option 2 ID : 264330718100
Option 3 ID : 264330718102
Option 4 ID : 264330718101
Status : Answered
Chosen Option : 4

Q.31 The stratosphere is located between which of the following atmospheric layers?

- Ans
- 1. Stratopause and Mesopause
 - 2. Mesopause and Exosphere
 - 3. Mesosphere and Thermosphere
 - 4. Tropopause and Stratopause

Question ID : 264330131746
Option 1 ID : 264330516084
Option 2 ID : 264330516083
Option 3 ID : 264330516086
Option 4 ID : 264330516085
Status : Answered
Chosen Option : 3

Q.32 Gangwon is the host city of which of the following sports events?

- Ans
- 1. Summer Olympics 2024
 - 2. Summer Youth Olympic Games 2024
 - 3. Winter Youth Olympic Games 2024
 - 4. Winter Olympics 2024

Question ID : 264330118903
Option 1 ID : 264330466267
Option 2 ID : 264330466269
Option 3 ID : 264330466270
Option 4 ID : 264330466268
Status : Answered
Chosen Option : 2

Q.33 Bacteria are the sole members of which of the following kingdoms?

- Ans
- 1. Animalia
 - 2. Plantae
 - 3. Protista
 - 4. Monera

Question ID : 264330117590
Option 1 ID : 264330462388
Option 2 ID : 264330462387
Option 3 ID : 264330462385
Option 4 ID : 264330462386
Status : Answered
Chosen Option : 3

Q.34 Which of the following awards is given in the field of dance by the government of Madhya Pradesh?

- Ans
- 1. Nandi Award for Best Choreographer
 - 2. Kalidas Samman
 - 3. Sanatan Sangeet Sanskriti
 - 4. Tagore Ratna

Question ID : 26433086663
Option 1 ID : 264330340296
Option 2 ID : 264330340293
Option 3 ID : 264330340294
Option 4 ID : 264330340295
Status : Answered
Chosen Option : 1

Q.35 In India, poverty estimations are based on surveys conducted by the National Sample Survey Organisation (NSSO). Under which ministry does the NSSO function?

- Ans
- 1. Ministry of Consumer Affairs
 - 2. Ministry of Statistics and Programme Implementation
 - 3. Ministry of Finance
 - 4. Ministry of Labour and Employment

Question ID : 264330120346
Option 1 ID : 264330471635
Option 2 ID : 264330471636
Option 3 ID : 264330471638
Option 4 ID : 264330471637
Status : Answered
Chosen Option : 2

Q.36 Neeraj Chopra became the first Indian to win the prestigious _____ Final in Switzerland in 2022.

- Ans
- 1. National Open Athletics Championships
 - 2. European Athletics Championships
 - 3. World Athletics Championships
 - 4. Zurich Diamond League

Question ID : 264330113734
Option 1 ID : 264330447021
Option 2 ID : 264330447024
Option 3 ID : 264330447023
Option 4 ID : 264330447022
Status : Answered
Chosen Option : 3

Q.37 'A shot at History' is an autobiography of whom among the following Olympic medal awardees?

- Ans
- 1. PV Sindhu
 - 2. Abhinav Bindra
 - 3. Sushil Kumar
 - 4. Leander Paes

Question ID : 26433064219
Option 1 ID : 264330251469
Option 2 ID : 264330251470
Option 3 ID : 264330251468
Option 4 ID : 264330251471
Status : Answered
Chosen Option : 2

Q.38 Who was the Viceroy of India when the Indian National Congress was founded?

- Ans
- 1. Lord Elgin II
 - 2. Lord Dufferin
 - 3. Lord Lansdowne
 - 4. Lord Ripon

Question ID : 264330171700
Option 1 ID : 264330673406
Option 2 ID : 264330673404
Option 3 ID : 264330673405
Option 4 ID : 264330673403
Status : Answered
Chosen Option : 2

Q.39 The Directive Principle of State Policy that requires the State 'to minimise inequalities in income, status, facilities and opportunities' was added by the _____ Constitution Amendment Act.

- Ans
- 1. 44th
 - 2. 40th
 - 3. 43rd
 - 4. 41st

Question ID : 264330130454
Option 1 ID : 264330510930
Option 2 ID : 264330510927
Option 3 ID : 264330510929
Option 4 ID : 264330510928
Status : Answered
Chosen Option : 1

Q.40 Who among the following discovered the ruins of Hampi in 1800?

- Ans
- 1. Robert Fitzroy
 - 2. Colonel Colin Mackenzie
 - 3. Robert Mackenzie
 - 4. Colin Fitzroy

Question ID : 264330118978
Option 1 ID : 264330466569
Option 2 ID : 264330466570
Option 3 ID : 264330466568
Option 4 ID : 264330466567
Status : Answered
Chosen Option : 3

Q.41 The official mascot of the Commonwealth Games 2022 was _____ .

- Ans 1. Perry
 2. Miraitova
 3. La'eeb
 4. Bing Dwen

Question ID : 264330132520
Option 1 ID : 264330519175
Option 2 ID : 264330519178
Option 3 ID : 264330519176
Option 4 ID : 264330519177
Status : Answered
Chosen Option : 2

Q.42 Which of the following statements is true with regard to the establishment of Central Public Sector Undertakings in India?

- Ans 1. They are established to fulfil the objective of a self-reliant India.
 2. They are supposed to reduce the importance of the private sector in India.
 3. They are only expected to generate greater profits to fund the Indian budget.
 4. They are established solely for export-oriented industrialisation.

Question ID : 264330117982
Option 1 ID : 264330463746
Option 2 ID : 264330463744
Option 3 ID : 264330463743
Option 4 ID : 264330463745
Status : Answered
Chosen Option : 1

Q.43 Contingency Fund of India is operated by the _____ .

- Ans 1. Executive action
 2. Reserve Bank's action
 3. Judicial action
 4. Parliamentary action

Question ID : 264330120183
Option 1 ID : 264330470987
Option 2 ID : 264330470990
Option 3 ID : 264330470988
Option 4 ID : 264330470989
Status : Answered
Chosen Option : 4

Q.44 In 2009, AR Rehman won Oscars in which of the given pair of categories?

- Ans 1. Best Sound Mixing and Best Original Song
 2. Best Original Musical and Best Sound Mixing
 3. Best Original Score and Best Sound Mixing
 4. Best Original Score and Best Original Song

Question ID : 264330111192
Option 1 ID : 264330436853
Option 2 ID : 264330436854
Option 3 ID : 264330436855
Option 4 ID : 264330436856
Status : Not Answered
Chosen Option : --

Q.45 The process of depositing a layer of any desired metal on another material by means of electricity is called _____.

- Ans
- 1. electroplating
 - 2. photocatalysis
 - 3. photoelectrochemical
 - 4. electrolysis

Question ID : 264330173636
Option 1 ID : 264330681026
Option 2 ID : 264330681023
Option 3 ID : 264330681025
Option 4 ID : 264330681024
Status : Answered
Chosen Option : 4

Q.46 According to Census of India 2011, in how many States / Union Territories was the female literacy rate recorded more than 90%?

- Ans
- 1. Four
 - 2. Two
 - 3. One
 - 4. Three

Question ID : 264330179430
Option 1 ID : 264330703723
Option 2 ID : 264330703725
Option 3 ID : 264330703726
Option 4 ID : 264330703724
Status : Answered
Chosen Option : 2

Q.47 Which of the following is abolished, and its practice forbidden in any form, according to Article 17 of the Constitution?

- Ans
- 1. Untouchability
 - 2. Exploitation
 - 3. Discrimination
 - 4. Freedom of speech

Question ID : 264330173495
Option 1 ID : 264330680460
Option 2 ID : 264330680462
Option 3 ID : 264330680459
Option 4 ID : 264330680461
Status : Answered
Chosen Option : 1

Q.48 Famous Scholar Al-Biruni wrote Kitab-ul-Hind in _____ language.

- Ans
- 1. Sanskrit
 - 2. Arabic
 - 3. Urdu
 - 4. Persian

Question ID : 264330119479
Option 1 ID : 264330468202
Option 2 ID : 264330468201
Option 3 ID : 264330468200
Option 4 ID : 264330468199
Status : Answered
Chosen Option : 4

Q.49 Lost wax casting technique was used to make _____ statues during Harappan civilisation.

- Ans**
- 1. bronze
 - 2. marble
 - 3. wood
 - 4. rock

Question ID : 264330106235
Option 1 ID : 264330417242
Option 2 ID : 264330417241
Option 3 ID : 264330417244
Option 4 ID : 264330417243
Status : Answered
Chosen Option : 1

Q.50 Gold Monetisation Scheme (GMS) was launched by the Government of India in _____. Under this scheme, one can deposit their gold in any form in a GMS account to earn interest as the price of the gold metal goes up.

- Ans**
- 1. 2005
 - 2. 2015
 - 3. 2020
 - 4. 2010

Question ID : 264330109123
Option 1 ID : 264330428769
Option 2 ID : 264330428771
Option 3 ID : 264330428772
Option 4 ID : 264330428770
Status : Not Answered
Chosen Option : --

Section : Reasoning

Q.1 Which of the following letter clusters will replace the question mark (?) in the given series to make it logically complete?
GMU, IKW, KIY, MGA, ?

- Ans**
- 1. OEC
 - 2. OIC
 - 3. OEB
 - 4. OCI

Question ID : 264330102224
Option 1 ID : 264330401364
Option 2 ID : 264330401361
Option 3 ID : 264330401362
Option 4 ID : 264330401363
Status : Answered
Chosen Option : 1

Q.2 Which of the following options will replace the question mark (?) in the given series?
512, 490, 468, 446, 424, ?

- Ans 1. 402
 2. 400
 3. 399
 4. 396

Question ID : 264330109432
Option 1 ID : 264330430005
Option 2 ID : 264330430007
Option 3 ID : 264330430006
Option 4 ID : 264330430008
Status : Answered
Chosen Option : 1

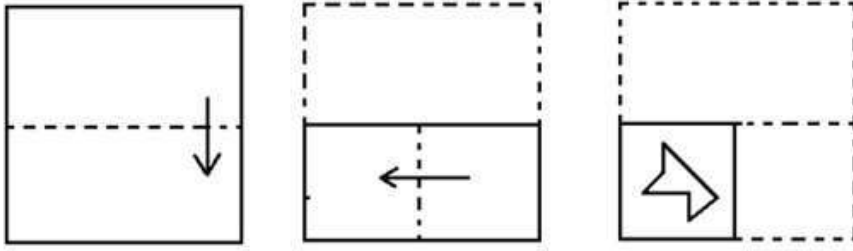
Q.3 Seven people - A, B, C, D, E, F and G - are sitting in a straight row, facing north. Only two people sit to the left of B. Only three people sit between G and B. D sits second to the right of A. D is not an immediate neighbour of B. E sits to the immediate right of F. Who among the following sits at the extreme left end of the line?

- Ans 1. F
 2. G
 3. A
 4. C

Question ID : 26433087014
Option 1 ID : 264330341697
Option 2 ID : 264330341700
Option 3 ID : 264330341699
Option 4 ID : 264330341698
Status : Answered
Chosen Option : 1

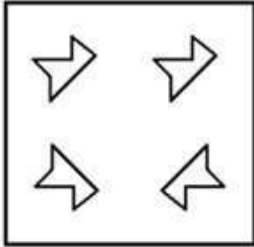
Adda247

Q.4 The sequence of folding a piece of paper and the manner in which the folded paper has been cut is shown below. Choose a figure which would most closely resemble the unfolded form of the paper.

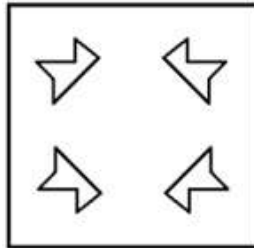


Ans

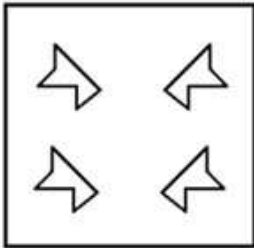
✗ 1.



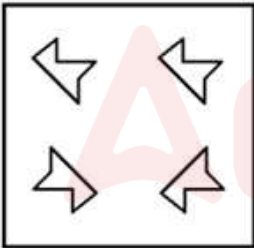
✓ 2.



✗ 3.



✗ 4.



Question ID : 264330112316

Option 1 ID : 264330441349

Option 2 ID : 264330441351

Option 3 ID : 264330441352

Option 4 ID : 264330441350

Status : Answered

Chosen Option : 2

Q.5 In a certain code language, 'WONDER' is written as 'KLTWCI' and 'SPRING' is written as 'OKPRTT'. How will 'PLAYER' be written as in that language?

- Ans
- 1. RTLSUX
 - 2. ROGBCI
 - 3. RPLSWZ
 - 4. RBOICG

Question ID : 26433082950

Option 1 ID : 264330325635

Option 2 ID : 264330325633

Option 3 ID : 264330325636

Option 4 ID : 264330325634

Status : Answered

Chosen Option : 2

Q.6 Select the option in which the given figure is embedded (rotation is NOT allowed).



Ans

- 1.
- 2.
- 3.
- 4.

Question ID : 264330114259

Option 1 ID : 264330449121

Option 2 ID : 264330449124

Option 3 ID : 264330449123

Option 4 ID : 264330449122

Status : Answered

Chosen Option : 2

Q.7 Select the set in which the numbers are related in the same way as are the numbers of the following sets.

(NOTE : Operations should be performed on the whole numbers, without breaking down the numbers into its constituent digits. E.g. 13 – Operations on 13 such as adding /deleting /multiplying etc. to 13 can be performed. Breaking down 13 into 1 and 3 and then performing mathematical operations on 1 and 3 is NOT allowed)
(184, 23), (264, 33)

Ans ✓ 1. (376, 47)

✗ 2. (270, 39)

✗ 3. (341, 41)

✗ 4. (250, 36)

Question ID : 26433052038

Option 1 ID : 264330203457

Option 2 ID : 264330203454

Option 3 ID : 264330203456

Option 4 ID : 264330203455

Status : Answered

Chosen Option : 1

Q.8 Two statements are given followed by two conclusions numbered I and II. Assuming the statements to be true, even if they seem to be at variance with commonly known facts, decide which of the conclusions logically follow(s) from the statements.

Statements:

All potatoes are vegetables.

All carrots are vegetables.

Conclusions:

I. Some carrots are potatoes.

II. All vegetables are carrots.

Ans ✓ 1. Neither conclusion I nor II follows

✗ 2. Only conclusion I follows

✗ 3. Both conclusions I and II follow

✗ 4. Only conclusion II follows

Question ID : 26433045341

Option 1 ID : 264330177802

Option 2 ID : 264330177799

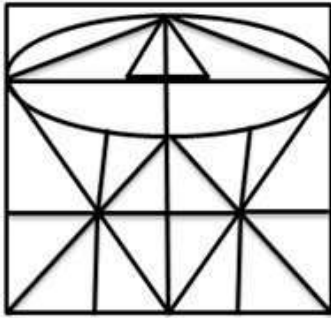
Option 3 ID : 264330177801

Option 4 ID : 264330177800

Status : Answered

Chosen Option : 1

Q.9 Select the option figure that is embedded in the given figure. (Rotation is not allowed).



Ans

- 1.
- 2.
- 3.
- 4.

Question ID : 264330114395

Option 1 ID : 264330449666

Option 2 ID : 264330449668

Option 3 ID : 264330449667

Option 4 ID : 264330449665

Status : Answered

Chosen Option : 1

Q.10 1, 2, 3, 4, 5 and 6 are written on different faces of a dice. Three different positions of the same dice are shown below. Find the number on the face opposite to the one showing '6'.

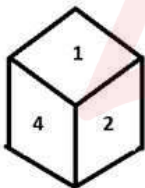


figure 1

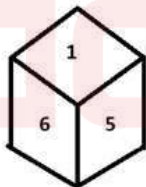


figure 2

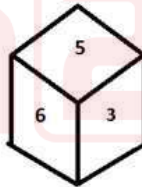


figure 3

- Ans
- 1. 5
 - 2. 4
 - 3. 1
 - 4. 2

Question ID : 264330110555

Option 1 ID : 264330434497

Option 2 ID : 264330434498

Option 3 ID : 264330434500

Option 4 ID : 264330434499

Status : Answered

Chosen Option : 2

Q.11 Select the correct combination of mathematical signs to sequentially replace the * signs and to balance the given equation.

$$36 * 16 * 4 * 20 * 90 * 46$$

- Ans
- 1. $\times, +, +, -, =$
 - 2. $+, +, \times, -, =$
 - 3. $-, +, +, \times, =$
 - 4. $-, +, \times, +, =$

Question ID : 26433076557

Option 1 ID : 264330300294

Option 2 ID : 264330300292

Option 3 ID : 264330300295

Option 4 ID : 264330300293

Status : Answered

Chosen Option : 4

Q.12 Select the figure that will replace the question mark (?) in the following figure series.



Ans

- 1.
- 2.
- 3.
- 4.

Question ID : 264330108955

Option 1 ID : 264330428099

Option 2 ID : 264330428098

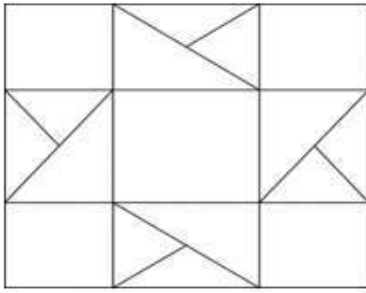
Option 3 ID : 264330428097

Option 4 ID : 264330428100

Status : Answered

Chosen Option : 2

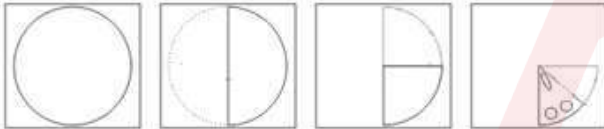
Q.13 How many triangles are there in the given figure?



- Ans
- 1. 10
 - 2. 16
 - 3. 12
 - 4. 8

Question ID : 26433085671
 Option 1 ID : 264330336386
 Option 2 ID : 264330336385
 Option 3 ID : 264330336388
 Option 4 ID : 264330336387
 Status : Answered
 Chosen Option : 2

Q.14 A paper is folded and cut as shown below. How will it appear when unfolded?



- Ans
- 1.
 - 2.
 - 3.
 - 4.

Question ID : 264330108977
 Option 1 ID : 264330428187
 Option 2 ID : 264330428188
 Option 3 ID : 264330428186
 Option 4 ID : 264330428185
 Status : Answered
 Chosen Option : 1

Q.15 Which figure should replace the question mark (?) in the following series to continue the pattern?

O	D	O	A	
D	O	A	O	?
9 = A	A 9 =	= 2 D	D = 2	

Ans

✓ 1.

O
D
2 + A

✗ 2.

O
D
= 2 A

✗ 3.

=
A
2 O D

✗ 4.

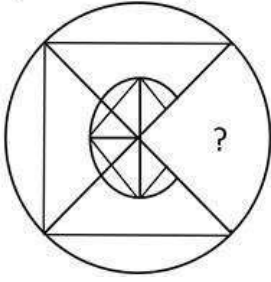
A
D
2 + O

Question ID : 264330129613
 Option 1 ID : 264330507818
 Option 2 ID : 264330507820
 Option 3 ID : 264330507819
 Option 4 ID : 264330507821

Status : Answered

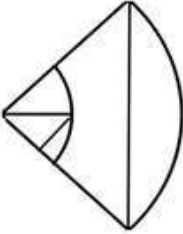
Chosen Option : 1

Q.16 Select the figure from the options that can replace the question mark (?) and complete the given pattern.

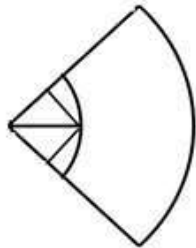


Ans

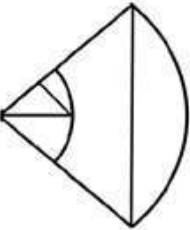
✗ 1.



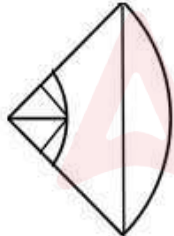
✗ 2.



✗ 3.



✓ 4.



Question ID : 26433082911
Option 1 ID : 264330325477
Option 2 ID : 264330325480
Option 3 ID : 264330325478
Option 4 ID : 264330325479

Status : Answered

Chosen Option : 4

Q.17 Which of the following option figures will complete the pattern in the figure given below?



Ans



Question ID : 26433089628

Option 1 ID : 264330352016

Option 2 ID : 264330352015


Option 3 ID : 264330352014

Option 4 ID : 264330352013

Status : Answered

Chosen Option : 2

Q.18 Select the option figure that will replace the question mark (?) in the figure given below to complete the pattern.

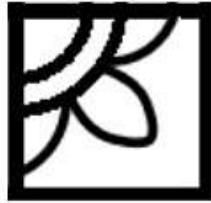


Ans

✗ 1.



✓ 2.



✗ 3.



✗ 4.



Question ID : 26433085564

Option 1 ID : 264330335958

Option 2 ID : 264330335959

Option 3 ID : 264330335957

Option 4 ID : 264330335960

Status : Answered

Chosen Option : 2

Q.19 Select the option that is related to the fifth letter cluster in the same way as the second letter cluster is related to the first letter cluster and the fourth letter cluster is related to the third letter cluster.

KFCZ : HLZF :: LVEG : IBBM :: PROD : ?

- Ans 1. MXLJ
 2. IHEX
 3. IBNX
 4. MKXJ

Question ID : 26433074691
 Option 1 ID : 264330292853
 Option 2 ID : 264330292855
 Option 3 ID : 264330292852
 Option 4 ID : 264330292854
 Status : Answered
 Chosen Option : 1

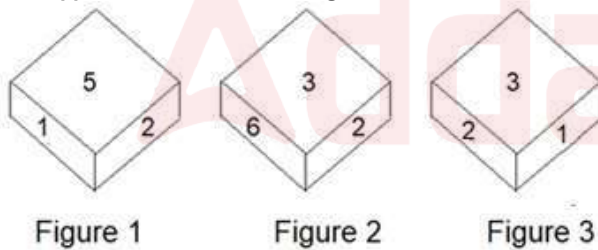
Q.20 Select the correct combination of mathematical signs to sequentially replace the * signs and to balance the given equation.

$60 * 40 * 10 * 50 * 100 * 160$

- Ans 1. x, +, -, +, =
 2. +, +, x, -, =
 3. +, x, -, +, =
 4. -, +, x, +, =

Question ID : 26433076554
 Option 1 ID : 264330300283
 Option 2 ID : 264330300281
 Option 3 ID : 264330300280
 Option 4 ID : 264330300282
 Status : Answered
 Chosen Option : 2

Q.21 Six numbers, 1, 2, 3, 4, 5 and 6, are written on the different faces of a dice. Three different positions of the same dice are shown (Figures 1-3). Find the number on the face opposite to the face showing '2'.



- Ans 1. 1
 2. 4
 3. 3
 4. 6

Question ID : 264330112584
 Option 1 ID : 264330442424
 Option 2 ID : 264330442421
 Option 3 ID : 264330442423
 Option 4 ID : 264330442422
 Status : Answered
 Chosen Option : 2

Q.22 Select the correct mirror image of the given combination when the mirror is placed at 'PQ' as shown below.

Q W 7 K J P
|
P
Q

Ans

1. 9 L K 7 M Q

2. 9 L K 7 W Q

3. Q M 7 K 1 6

4. 9 L K 7 W Q

Question ID : 264330129818

Option 1 ID : 264330508504


Option 2 ID : 264330508503

Option 3 ID : 264330508505

Option 4 ID : 264330508506

Status : Answered

Chosen Option : 2



Q.23 Which figure should replace the question mark (?) if the following series were to be continued?

P	O	T	D	8	P	T	D	S	Z	8	T	S	Z	△	
	△			O		P			D			T			?
S	8	4	T	△	S	△	8	O	S	P	△	P	8	D	

Ans

✗ 1.

P	8	S
	Z	
D	T	△

✗ 2.

P	S	D
	△	
8	Z	T

✓ 3.

F	8	S
	Z	
△	T	P

✗ 4.

D	8	S
	Z	
△	T	P

Question ID : 264330103881

Option 1 ID : 264330407827

Option 2 ID : 264330407825

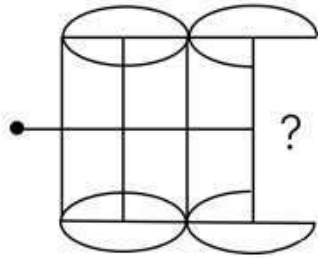
Option 3 ID : 264330407828

Option 4 ID : 264330407826

Status : Answered

Chosen Option : 3

Q.24 Select the figure from the given options that will replace the question mark (?) in the figure given below to complete the pattern so that the final image is symmetrical.



Ans

1.



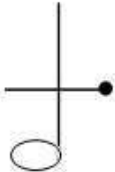
2.



3.



4.



Question ID : 264330114726

Option 1 ID : 264330450991

Option 2 ID : 264330450989

Option 3 ID : 264330450990

Option 4 ID : 264330450992

Status : Answered

Chosen Option : 2

Q.25 Select the option that is related to the third term in the same way as the second term is related to the first term and the sixth term is related to the fifth term.

15 : 135 :: 13 : ? :: 24 : 216

Ans 1. 121

2. 117

3. 104

4. 91

Question ID : 264330102257

Option 1 ID : 264330401496

Option 2 ID : 264330401494

Option 3 ID : 264330401493

Option 4 ID : 264330401495

Status : Answered

Chosen Option : 2

Q.1 Find the sum of all those prime numbers which are less than 28.

- Ans
- 1. 97
 - 2. 120
 - 3. 110
 - 4. 100

Question ID : 264330105989
Option 1 ID : 264330416257
Option 2 ID : 264330416260
Option 3 ID : 264330416259
Option 4 ID : 264330416258
Status : Answered
Chosen Option : 4

Q.2 $0.\overline{63}$ expressed in the form $\frac{p}{q}$ equals:

- Ans
- 1. $\frac{9}{11}$
 - 2. $\frac{3}{11}$
 - 3. $\frac{7}{11}$
 - 4. $\frac{6}{11}$

Question ID : 264330119325
Option 1 ID : 264330467590
Option 2 ID : 264330467588
Option 3 ID : 264330467589
Option 4 ID : 264330467587
Status : Answered
Chosen Option : 3

Q.3 Select the correct statement.

- Ans
- 1. Loss % = $\frac{SP - CP}{CP} \times 100$
 - 2. Profit % = $\frac{SP - CP}{CP} \times 100$
 - 3. Profit % = $\frac{CP - SP}{CP} \times 100$
 - 4. Loss % = $\frac{SP + CP}{CP} \times 100$

Question ID : 264330122069
Option 1 ID : 264330478412
Option 2 ID : 264330478413
Option 3 ID : 264330478411
Option 4 ID : 264330478414
Status : Answered
Chosen Option : 2

Q.4 Let $x = \frac{6}{5}$, then arrange the numbers $6x, \frac{37}{6}, 6 - x$ and $5 + x$ in ascending order.

- Ans
- ✓ 1. $6 - x, \frac{37}{6}, 5 + x, 6x$
 - ✗ 2. $6 - x, 5 + x, 6x, \frac{37}{6}$
 - ✗ 3. $6 - x, 5 + x, \frac{37}{6}, 6x$
 - ✗ 4. $6 - x, \frac{37}{6}, 6x, 5 + x$

Question ID : 264330112094

Option 1 ID : 264330440461

Option 2 ID : 264330440463

Option 3 ID : 264330440462

Option 4 ID : 264330440464

Status : Answered

Chosen Option : 1

Q.5 The LCM of $\frac{9}{10}, \frac{12}{25}, \frac{18}{35}, \frac{21}{40}$ is:

- Ans
- ✗ 1. $\frac{100}{9}$
 - ✓ 2. $\frac{252}{5}$
 - ✗ 3. $\frac{9}{100}$
 - ✗ 4. $\frac{151}{7}$

Question ID : 264330104338

Option 1 ID : 264330409654

Option 2 ID : 264330409655

Option 3 ID : 264330409653

Option 4 ID : 264330409656

Status : Answered

Chosen Option : 2

Q.6 The sum of money A initially had was 20% less than the sum of money B had. If B gave 16% of her money to her brother, by what percentage should A's sum increase so that A and B finally have identical amounts?

- Ans
- ✗ 1. 4.5%
 - ✓ 2. 5%
 - ✗ 3. 4%
 - ✗ 4. 6%

Question ID : 264330130673

Option 1 ID : 264330511803

Option 2 ID : 264330511806

Option 3 ID : 264330511805

Option 4 ID : 264330511804

Status : Answered

Chosen Option : 2

Q.7 A, B and C can do a piece of work in 10 days, 20 days and 40 days, respectively. On the first day A is assisted by B, and on the second day C assists A. This 2-day cycle is repeated starting with A and B, till the work gets completed. How long (in whole number of days) would it take to complete the work?

- Ans
- 1. 10
 - 2. 6
 - 3. 4
 - 4. 8

Question ID : 264330103568

Option 1 ID : 264330406579

Option 2 ID : 264330406580

Option 3 ID : 264330406577

Option 4 ID : 264330406578

Status : Answered

Chosen Option : 4

Q.8 Find the compound interest (in ₹) on ₹24,000 at 10% per annum for 3 years?

- Ans
- 1. 7044
 - 2. 7200
 - 3. 7494
 - 4. 7944

Question ID : 264330104259

Option 1 ID : 264330409337

Option 2 ID : 264330409339

Option 3 ID : 264330409338

Option 4 ID : 264330409340

Status : Answered

Chosen Option : 4

Q.9 The vertical height of a conical tent is 42 decimetre and the diameter of its base is 5.4 m. Find the number of persons it can accommodate if each person is to be allowed 2,673 cu. decimetre of space. (Use $\pi = \frac{22}{7}$)

- Ans
- 1. 13
 - 2. 17
 - 3. 12
 - 4. 11

Question ID : 264330118111

Option 1 ID : 264330464260

Option 2 ID : 264330464261

Option 3 ID : 264330464259

Option 4 ID : 264330464262

Status : Not Answered

Chosen Option : --

Q.10 The area of a right triangle is 48 m^2 and one of the two sides containing the right angle is 8 m long. What is the length (in m) of the other side containing the right angle?

- Ans
- 1. 6
 - 2. 16
 - 3. 12
 - 4. 24

Question ID : 264330131200
Option 1 ID : 264330513911
Option 2 ID : 264330513913
Option 3 ID : 264330513912
Option 4 ID : 264330513914
Status : Answered
Chosen Option : 3

Q.11 A shopkeeper offers a discount of 10% on an article and gains 15%. Calculate the marked price of an article which he purchased for ₹1,350.

- Ans
- 1. ₹1,450
 - 2. ₹1,550
 - 3. ₹1,630
 - 4. ₹1,725

Question ID : 264330183848
Option 1 ID : 264330721068
Option 2 ID : 264330721069
Option 3 ID : 264330721070
Option 4 ID : 264330721071
Status : Answered
Chosen Option : 4

Q.12 If the income of P is 25% less than Q, then the combined income of P and Q is what percentage more than P?

- Ans
- 1. 75%
 - 2. 133.33%
 - 3. 25%
 - 4. 125%

Question ID : 264330111460
Option 1 ID : 264330437926
Option 2 ID : 264330437925
Option 3 ID : 264330437927
Option 4 ID : 264330437928
Status : Answered
Chosen Option : 2

Q.13 The average of 24, 39 and y is 33. What is the value of y?

- Ans 1. 37
 2. 36
 3. 35
 4. 38

Question ID : 264330131119
Option 1 ID : 264330513589
Option 2 ID : 264330513588
Option 3 ID : 264330513587
Option 4 ID : 264330513590
Status : Answered
Chosen Option : 2

Q.14 Ramu takes 1 hour 20 minutes in walking a distance and riding back to the starting place. He could walk both ways in 2 hours 30 minutes. The time taken by him to ride back both ways is:

- Ans 1. 22 minutes
 2. 20 minutes
 3. 18 minutes
 4. 10 minutes

Question ID : 264330183859
Option 1 ID : 264330721112
Option 2 ID : 264330721113
Option 3 ID : 264330721114
Option 4 ID : 264330721115
Status : Answered
Chosen Option : 4

Q.15 Radha invested a certain sum on simple interest, which will amount to ₹16,200 in 3 years and to ₹17,400 in 4 years. Find the sum she invested.

- Ans 1. ₹11,400
 2. ₹14,000
 3. ₹12,600
 4. ₹13,800

Question ID : 264330118083
Option 1 ID : 264330464149
Option 2 ID : 264330464147
Option 3 ID : 264330464148
Option 4 ID : 264330464150
Status : Answered
Chosen Option : 3

Q.1 Which is the correct syntax for writing SUMIF() function in MS Excel?

- Ans
- 1. SUMIF(criteria)
 - 2. SUMIF(range, criteria, [sum_range])
 - 3. SUMIF(range, criteria)
 - 4. SUMIF(range)

Question ID : 264330182124
Option 1 ID : 264330714337
Option 2 ID : 264330714336
Option 3 ID : 264330714338
Option 4 ID : 264330714335
Status : Not Answered
Chosen Option : --

Q.2 _____ is used to describe the page direction in which the contents of the page are to be displayed or printed in MS Word 365.

- Ans
- 1. Columns
 - 2. Page margin
 - 3. Page orientation
 - 4. Page size

Question ID : 264330180633
Option 1 ID : 264330708501
Option 2 ID : 264330708502
Option 3 ID : 264330708499
Option 4 ID : 264330708500
Status : Answered
Chosen Option : 3

Q.3 Which of the following is used to move a selected text from one place to another in MS word 365?

- Ans
- 1. Cut-Copy
 - 2. Cut-Paste
 - 3. Copy-Copy
 - 4. Copy-Paste

Question ID : 264330180644
Option 1 ID : 264330708545
Option 2 ID : 264330708544
Option 3 ID : 264330708546
Option 4 ID : 264330708543
Status : Answered
Chosen Option : 2

Q.4 Which Internet access technique uses the existing cable television infrastructure to provide high-speed Internet access to users?

- Ans
- 1. Cable Internet
 - 2. DSL (Digital Subscriber Line)
 - 3. Dial-up
 - 4. Fiber-optic

Question ID : 264330173301
Option 1 ID : 264330679686
Option 2 ID : 264330679683
Option 3 ID : 264330679685
Option 4 ID : 264330679684
Status : Answered
Chosen Option : 4

Q.5 Which of the following is a unique identifier for each user, typically in the format of name@domain.com?

- Ans
- 1. Password
 - 2. Email server
 - 3. Email address
 - 4. Email client

Question ID : 264330180381
Option 1 ID : 264330707494
Option 2 ID : 264330707492
Option 3 ID : 264330707493
Option 4 ID : 264330707491
Status : Answered
Chosen Option : 3

Q.6 Which of the following tabs in the MS Word 365, ribbon has the Spelling and Grammar option?

- Ans
- 1. Review
 - 2. Layout
 - 3. Insert
 - 4. Edit

Question ID : 264330178598
Option 1 ID : 264330700421
Option 2 ID : 264330700422
Option 3 ID : 264330700420
Option 4 ID : 264330700419
Status : Answered
Chosen Option : 1

Q.7 In MS Excel 365, which option in Microsoft Excel allows you to move the selected text or cells to a different worksheet or workbook?

- Ans
- 1. Print
 - 2. Copy
 - 3. Move
 - 4. Cut

Question ID : 264330178080
Option 1 ID : 264330698385
Option 2 ID : 264330698384
Option 3 ID : 264330698386
Option 4 ID : 264330698383
Status : Answered
Chosen Option : 1

Q.8 In MS Excel 365, what is the shortcut to move to the last cell on a worksheet, to the lowest used row of the rightmost used column?

- Ans**
- 1. Ctrl + Home
 - 2. Shift + Home
 - 3. Ctrl + End
 - 4. Shift + End

Question ID : 264330182753
Option 1 ID : 264330716785
Option 2 ID : 264330716786
Option 3 ID : 264330716783
Option 4 ID : 264330716784
Status : Answered
Chosen Option : 4

Q.9 What is the primary purpose of creating a table in Microsoft Word 365?

- Ans**
- 1. For enhancing the page layout and margins
 - 2. For organising and presenting information in rows and columns
 - 3. For adding decorative elements to the document
 - 4. For applying font styles and colours to text

Question ID : 264330180707
Option 1 ID : 264330708796
Option 2 ID : 264330708797
Option 3 ID : 264330708795
Option 4 ID : 264330708798
Status : Answered
Chosen Option : 2

Q.10 Where is the Help button located in MS-Word 2010?

- Ans**
- 1. Lower left corner
 - 2. Top left corner
 - 3. Lower right corner
 - 4. Top right corner

Question ID : 264330178095
Option 1 ID : 264330698446
Option 2 ID : 264330698445
Option 3 ID : 264330698443
Option 4 ID : 264330698444
Status : Answered
Chosen Option : 4

Constable Executive Male and Female in Delhi Police Examination 2023

Roll Number	
Candidate Name	
Venue Name	iON Digital Zone iDZ Siliguri
Exam Date	28/11/2023
Exam Time	9:00 AM - 10:30 AM
Subject	Constable Executive Male and Female in Delhi Police Examination 2023

Section : General Knowledge

Q.1 The structures of temples located in India are classified as phamsana and latina on the basis of which of their parts?

- Ans
- 1. Garbagriha
 - 2. Amalaka
 - 3. Shikhara
 - 4. Mandap

Question ID : 264330141824

Option 1 ID : 264330555616

Option 2 ID : 264330555618

Option 3 ID : 264330555615

Option 4 ID : 264330555617

Status : Answered

Chosen Option : 2

Q.2 Which of the following is the major reservoir of carbon on earth?

- Ans
- 1. Ponds
 - 2. Rivers
 - 3. Ocean
 - 4. Lakes

Question ID : 264330117608

Option 1 ID : 264330462458

Option 2 ID : 264330462460

Option 3 ID : 264330462457

Option 4 ID : 264330462459

Status : Answered

Chosen Option : 3

Q.3 If nominal GDP is ₹1,800 and real GDP is ₹1,000. What will be the value of GDP deflator?

- Ans
- 1. 180%
 - 2. 200%
 - 3. 190%
 - 4. 150%

Question ID : 264330141492

Option 1 ID : 264330554304

Option 2 ID : 264330554306

Option 3 ID : 264330554305

Option 4 ID : 264330554303

Status : Answered

Chosen Option : 1

Q.4 Which of the following dance forms is performed by the tribal people of Andhra Pradesh?

- Ans
- 1. Bihu
 - 2. Garba
 - 3. Jawara
 - 4. Dhimsa

Question ID : 264330132393
Option 1 ID : 264330518667
Option 2 ID : 264330518669
Option 3 ID : 264330518670
Option 4 ID : 264330518668
Status : Answered
Chosen Option : 3

Q.5 At what degree from the epicentre does the seismograph record the arrival of P-waves but NOT S-waves?

- Ans
- 1. Beyond 105°
 - 2. Between 90° and 115°
 - 3. Beyond 145°
 - 4. Within 90°

Question ID : 264330141738
Option 1 ID : 264330555271
Option 2 ID : 264330555272
Option 3 ID : 264330555274
Option 4 ID : 264330555273
Status : Answered
Chosen Option : 4

Q.6 Which of the following statements is/are true about globalisation?

- I. It is about integration with world economies
- II. It promotes competition among producers
- III. Appreciation of domestic currency improves exports

- Ans
- 1. Only I and II
 - 2. Only I and III
 - 3. Only I
 - 4. Only II and III

Question ID : 264330109408
Option 1 ID : 264330429909
Option 2 ID : 264330429910
Option 3 ID : 264330429912
Option 4 ID : 264330429911
Status : Answered
Chosen Option : 3

Q.7 What was the fraction of sales price collected as tax under the Mauryans?

- Ans
- 1. $\frac{1}{10}$
 - 2. $\frac{1}{15}$
 - 3. $\frac{1}{5}$
 - 4. $\frac{1}{20}$

Question ID : 264330117995

Option 1 ID : 264330463796

Option 2 ID : 264330463797

Option 3 ID : 264330463795

Option 4 ID : 264330463798

Status : Answered

Chosen Option : 1

Q.8 In which of the following years was the Arjuna Award started in India?

- Ans
- 1. 1963
 - 2. 1961
 - 3. 1964
 - 4. 1962

Question ID : 264330118443

Option 1 ID : 264330465175

Option 2 ID : 264330465173

Option 3 ID : 264330465176

Option 4 ID : 264330465174

Status : Answered

Chosen Option : 4

Q.9 Hydrogenation of vegetable oils is catalysed by _____.

- Ans
- 1. Al
 - 2. Cu
 - 3. Ni
 - 4. Fe

Question ID : 264330117618

Option 1 ID : 264330462499

Option 2 ID : 264330462497

Option 3 ID : 264330462498

Option 4 ID : 264330462500

Status : Answered

Chosen Option : 1

Q.10 Which of the following Articles of the Indian Constitution states that 'The Directive Principles of State Policy are fundamental in the governance of the country and it shall be the duty of the State to apply the Principles in making laws'?

- Ans
- 1. Article 51
 - 2. Article 38
 - 3. Article 37
 - 4. Article 36

Question ID : 264330114766
Option 1 ID : 264330451152
Option 2 ID : 264330451151
Option 3 ID : 264330451150
Option 4 ID : 264330451149
Status : Answered
Chosen Option : 4

Q.11 Sarva Shiksha Abhiyan is a flagship programme of the government of India, that was started in 2001 to achieve _____.

- Ans
- 1. Universalisation of Higher Education (UHE)
 - 2. Universalisation of School Education (USE)
 - 3. Universalisation of Pre-primary Education (UPPE)
 - 4. Universalisation of Elementary Education (UEE)

Question ID : 264330110008
Option 1 ID : 264330432310
Option 2 ID : 264330432311
Option 3 ID : 264330432312
Option 4 ID : 264330432309
Status : Answered
Chosen Option : 4

Q.12 The Finance Commission submits its report to the:

- Ans
- 1. President of India
 - 2. Finance Minister
 - 3. Prime Minister of India
 - 4. Parliament

Question ID : 264330177748
Option 1 ID : 264330697101
Option 2 ID : 264330697102
Option 3 ID : 264330697100
Option 4 ID : 264330697099
Status : Answered
Chosen Option : 1

Q.13 Which among the following states has the lowest poverty ratio as per the Multidimensional Poverty Index (2021) of the NITI Aayog?

- Ans 1. Kerala
 2. Tamil Nadu
 3. Goa
 4. Sikkim

Question ID : 264330177861
Option 1 ID : 264330697534
Option 2 ID : 264330697533
Option 3 ID : 264330697531
Option 4 ID : 264330697532
Status : Answered
Chosen Option : 1

Q.14 The 'Valmiki Ambedkar Awas Yojana' (VAMBAY) was launched in which year by the Government of India?

- Ans 1. 2007
 2. 2003
 3. 2001
 4. 2005

Question ID : 264330120377
Option 1 ID : 264330471762
Option 2 ID : 264330471760
Option 3 ID : 264330471759
Option 4 ID : 264330471761
Status : Answered
Chosen Option : 1

Q.15 The Teesta low dam is located in which of the following states?

- Ans 1. Sikkim
 2. Bihar
 3. Arunachal Pradesh
 4. Tripura

Question ID : 264330182886
Option 1 ID : 264330717288
Option 2 ID : 264330717291
Option 3 ID : 264330717289
Option 4 ID : 264330717290
Status : Answered
Chosen Option : 1

Q.16 The main source of ocean heat is _____.

- Ans 1. gases under water
 2. air
 3. sunlight
 4. minerals under water

Question ID : 264330118519
Option 1 ID : 264330465478
Option 2 ID : 264330465477
Option 3 ID : 264330465479
Option 4 ID : 264330465480
Status : Answered
Chosen Option : 3

Q.17 Swami Vivekananda established which of the following social organisations in 1897?

- Ans 1. Arya Samaj
 2. Prarthana Samaj
 3. Paramhansa Sabha
 4. Ramakrishna Mission

Question ID : 264330183133
Option 1 ID : 264330718264
Option 2 ID : 264330718267
Option 3 ID : 264330718265
Option 4 ID : 264330718266
Status : Answered
Chosen Option : 4

Q.18 'Kim', the English novel about a boy, was written by which of the following authors?

- Ans 1. Joseph Conrad
 2. Ruskin Bond
 3. Jerome K Jerome
 4. Rudyard Kipling

Question ID : 26433055373
Option 1 ID : 264330216478
Option 2 ID : 264330216476
Option 3 ID : 264330216479
Option 4 ID : 264330216477
Status : Answered
Chosen Option : 4

Q.19 In which of the following years was the Central Vigilance Commission set up by the Government of India?

- Ans 1. 1975
 2. 1964
 3. 1970
 4. 1984

Question ID : 26433086823
Option 1 ID : 264330340934
Option 2 ID : 264330340936
Option 3 ID : 264330340935
Option 4 ID : 264330340933
Status : Answered
Chosen Option : 4

Q.20 Tamladu is the religious festival of the Digaru Mishmis tribe of which Indian state?

- Ans 1. Madhya Pradesh
 2. Jharkhand
 3. Arunachal Pradesh
 4. Odisha

Question ID : 264330132412
Option 1 ID : 264330518746
Option 2 ID : 264330518744
Option 3 ID : 264330518745
Option 4 ID : 264330518743
Status : Answered
Chosen Option : 2

Q.21 Which of the following is NOT a Fundamental Duty?

- Ans 1. To develop the scientific temper
 2. To pay income tax in time
 3. To value rich heritage
 4. To protect the natural environment

Question ID : 264330130777
Option 1 ID : 264330512222
Option 2 ID : 264330512221
Option 3 ID : 264330512219
Option 4 ID : 264330512220
Status : Answered
Chosen Option : 2

Q.22 Name the employee of the East India Company who deciphered Asokan Brahmi in 1830s.

- Ans 1. James Prinsep
 2. James Mills
 3. William Risley
 4. William Crookes

Question ID : 264330119468
Option 1 ID : 264330468158
Option 2 ID : 264330468156
Option 3 ID : 264330468157
Option 4 ID : 264330468155
Status : Answered
Chosen Option : 1

Q.23 In 2022, Air India was privatised. Which of the following private business groups has taken over Air India?

- Ans 1. Adani
 2. Birla
 3. TATA
 4. Reliance

Question ID : 26433064590
Option 1 ID : 264330252953
Option 2 ID : 264330252955
Option 3 ID : 264330252954
Option 4 ID : 264330252952
Status : Answered
Chosen Option : 3

Q.24 The Halda festival of Himachal Pradesh is primarily celebrated by which religious community?

- Ans 1. Hindu
 2. Jain
 3. Buddhist
 4. Parsi

Question ID : 264330109622
Option 1 ID : 264330430767
Option 2 ID : 264330430765
Option 3 ID : 264330430766
Option 4 ID : 264330430768
Status : Answered
Chosen Option : 3

Q.25 Which of the following is NOT a Directive Principle of State Policy?

- Ans 1. Valuing the rich heritage of our culture
 2. Promotion of co-operative societies
 3. Uniform civil code for the citizens
 4. Separation of judiciary from executive

Question ID : 264330110587
Option 1 ID : 264330434626
Option 2 ID : 264330434625
Option 3 ID : 264330434628
Option 4 ID : 264330434627
Status : Answered
Chosen Option : 1

Q.26 In which year did India qualify for the FIFA World Cup?

- Ans 1. 1958
 2. 1954
 3. 1946
 4. 1950

Question ID : 264330119273
Option 1 ID : 264330467382
Option 2 ID : 264330467380
Option 3 ID : 264330467379
Option 4 ID : 264330467381
Status : Answered
Chosen Option : 3

Q.27 In India, there are various crops produced. Which group of crops belong to the pulses?

- Ans 1. Tea and coffee
 2. Jute and cotton
 3. Wheat and rice
 4. Gram and tur

Question ID : 264330119881
Option 1 ID : 264330469801
Option 2 ID : 264330469802
Option 3 ID : 264330469799
Option 4 ID : 264330469800
Status : Answered
Chosen Option : 4

Q.28 Which of the following Statutory Commissions was set up to study the working of the government after the Government of India Act 1919 was passed?

- Ans 1. The Hunter Commission
 2. The Butler Commission
 3. The Simon Commission
 4. The Campbell Commission

Question ID : 264330182876
Option 1 ID : 264330717248
Option 2 ID : 264330717250
Option 3 ID : 264330717249
Option 4 ID : 264330717251
Status : Answered
Chosen Option : 3

Q.29 Kummi dance, usually performed during harvest festivals and Navratri, is a popular dance of which southern state?

- Ans
- 1. Karnataka
 - 2. Tamil Nadu
 - 3. Telangana
 - 4. Andhra Pradesh

Question ID : 264330110424
Option 1 ID : 264330433974
Option 2 ID : 264330433973
Option 3 ID : 264330433976
Option 4 ID : 264330433975
Status : Answered
Chosen Option : 4

Q.30 Which mountain range includes the Shivalik range as a part?

- Ans
- 1. Western Ghats
 - 2. Eastern Ghats
 - 3. Himalayas
 - 4. Aravalli

Question ID : 264330174347
Option 1 ID : 264330683807
Option 2 ID : 264330683809
Option 3 ID : 264330683808
Option 4 ID : 264330683810
Status : Answered
Chosen Option : 3

Q.31 Which of the following nations won the inaugural under-19 women's cricket world championship?

- Ans
- 1. New Zealand
 - 2. England
 - 3. Australia
 - 4. India

Question ID : 264330176926
Option 1 ID : 264330693901
Option 2 ID : 264330693902
Option 3 ID : 264330693900
Option 4 ID : 264330693899
Status : Answered
Chosen Option : 4

Q.32 Schedule A of the Industrial Policy Resolution 1956 comprised of industries which would be:

- Ans
- 1. in the private sector
 - 2. owned by both private and public sector
 - 3. exclusively owned by foreign nationals
 - 4. exclusively owned by the state

Question ID : 264330117747
Option 1 ID : 264330462803
Option 2 ID : 264330462805
Option 3 ID : 264330462806
Option 4 ID : 264330462804
Status : Answered
Chosen Option : 4

Q.33 The disintegration of the Bahamani Empire gave rise to _____ independent kingdoms in Deccan.

- Ans 1. four
 2. five
 3. two
 4. seven

Question ID : 264330114083
Option 1 ID : 264330448420
Option 2 ID : 264330448419
Option 3 ID : 264330448418
Option 4 ID : 264330448417
Status : Answered
Chosen Option : 1

Q.34 Articles 36 to 51 of the Indian Constitution does NOT deal with which issues?

- Ans 1. Equal justice and free legal aid
 2. Secure suitable legislation and living wage for workers
 3. Secure a social order for promotion of welfare of the people
 4. Control of economic fluctuations for the benefits of a person or group

Question ID : 264330118538
Option 1 ID : 264330465553
Option 2 ID : 264330465555
Option 3 ID : 264330465554
Option 4 ID : 264330465556
Status : Answered
Chosen Option : 4

Q.35 The famous tripartite struggle between the Gurjara-Pratihara, Rashtrakuta and Pala dynasties was fought for control over _____.

- Ans 1. Panipat
 2. Manyakheta
 3. Avanti
 4. Kannauj

Question ID : 264330182257
Option 1 ID : 264330714854
Option 2 ID : 264330714851
Option 3 ID : 264330714852
Option 4 ID : 264330714853
Status : Answered
Chosen Option : 4

Q.36 Which state of the matter has LEAST force of attraction between its particles?

- Ans 1. Solid
 2. Plasma
 3. Liquid
 4. Gas

Question ID : 264330173651
Option 1 ID : 264330681084
Option 2 ID : 264330681083
Option 3 ID : 264330681086
Option 4 ID : 264330681085
Status : Answered
Chosen Option : 4

Q.37 Madhu Mansuri Hasmukh is a singer, song writer and activist from the state of _____.

- Ans
- 1. Madhya Pradesh
 - 2. Andhra Pradesh
 - 3. Jharkhand
 - 4. Chhattisgarh

Question ID : 26433011958
Option 1 ID : 264330439920
Option 2 ID : 264330439919
Option 3 ID : 264330439918
Option 4 ID : 264330439917
Status : Answered
Chosen Option : 4

Q.38 The 'Population Projection' in demographics refers to _____.

- Ans
- 1. measuring the population growth rate
 - 2. identifying the sex ratio in a particular area
 - 3. calculating the population density of a region
 - 4. estimating future population size based on past data and trends

Question ID : 264330179269
Option 1 ID : 264330703081
Option 2 ID : 264330703082
Option 3 ID : 264330703079
Option 4 ID : 264330703080
Status : Answered
Chosen Option : 4

Q.39 Part _____ of the Constitution of India deals with the Union Executive.

- Ans
- 1. V
 - 2. VI
 - 3. I
 - 4. III

Question ID : 264330130466
Option 1 ID : 264330510975
Option 2 ID : 264330510978
Option 3 ID : 264330510977
Option 4 ID : 264330510976
Status : Answered
Chosen Option : 1

Q.40 The term 'slip' is related to which of the following games?

- Ans
- 1. Cricket
 - 2. Hockey
 - 3. Badminton
 - 4. Football

Question ID : 264330118910
Option 1 ID : 264330466295
Option 2 ID : 264330466297
Option 3 ID : 264330466298
Option 4 ID : 264330466296
Status : Answered
Chosen Option : 1

Q.41 Which of the following is an example of the most 'Liquid form of Money'?

- Ans 1. National savings deposits
 2. Currency notes
 3. Fixed deposit receipts
 4. Bonds

Question ID : 264330118240
Option 1 ID : 264330464776
Option 2 ID : 264330464777
Option 3 ID : 264330464775
Option 4 ID : 264330464778
Status : Answered
Chosen Option : 2

Q.42 Who among the following established the Academy of Performing Arts and Research in Switzerland?

- Ans 1. Pandit Kumar Gandharva
 2. Pandit Bhimsen Joshi
 3. Dr. M Balamuralikrishna
 4. Pandit Jasraj

Question ID : 264330114170
Option 1 ID : 264330448768
Option 2 ID : 264330448766
Option 3 ID : 264330448765
Option 4 ID : 264330448767
Status : Answered
Chosen Option : 4

Q.43 The interim Government was provisioned under which Plan/Act of the Government of India, by the Britishers?

- Ans 1. Cripps Mission Plan
 2. Cabinet Mission Plan
 3. Government of India Act, 1935
 4. Government of India Act, 1919

Question ID : 264330118004
Option 1 ID : 264330463832
Option 2 ID : 264330463833
Option 3 ID : 264330463831
Option 4 ID : 264330463834
Status : Answered
Chosen Option : 2

Q.44 Who founded the Abhinav Bharat Society?

- Ans 1. Lala Hardayal
 2. Madan Lal Dhingra
 3. P Mitra
 4. Savarkar Brothers

Question ID : 264330119716
Option 1 ID : 264330469139
Option 2 ID : 264330469141
Option 3 ID : 264330469142
Option 4 ID : 264330469140
Status : Answered
Chosen Option : 4

Q.45 The fundamental objective of the second five year plan was to initiate and accelerate the process of _____ so that the development of Indian economy takes a firm base.

- Ans**
- 1. liberalisation
 - 2. globalisation
 - 3. industrialisation
 - 4. privatisation

Question ID : 264330109990
Option 1 ID : 264330432240
Option 2 ID : 264330432239
Option 3 ID : 264330432237
Option 4 ID : 264330432238
Status : Answered
Chosen Option : 3

Q.46 Who among the following is a famous Chhau dancer?

- Ans**
- 1. Sadashiva Pradhan
 - 2. Alloka Kanungo
 - 3. Pratibha Prahlad
 - 4. Chhaya Khutegaonkar

Question ID : 264330106201
Option 1 ID : 264330417106
Option 2 ID : 264330417107
Option 3 ID : 264330417105
Option 4 ID : 264330417108
Status : Answered
Chosen Option : 1

Q.47 Tanjore Bala saraswati was a prominent dancer of which form of Indian Classical Dance?

- Ans**
- 1. Manipuri
 - 2. Bharatanatyam
 - 3. Odissi
 - 4. Kuchipudi

Question ID : 264330111203
Option 1 ID : 264330436900
Option 2 ID : 264330436899
Option 3 ID : 264330436898
Option 4 ID : 264330436897
Status : Answered
Chosen Option : 4

Q.48 The Stupa sculptures found at Sanghol in Punjab belongs to which of the following schools?

- Ans**
- 1. Gandhara
 - 2. Sarnath
 - 3. Amravati
 - 4. Mathura

Question ID : 264330109629
Option 1 ID : 264330430794
Option 2 ID : 264330430796
Option 3 ID : 264330430795
Option 4 ID : 264330430793
Status : Answered
Chosen Option : 1

Q.49 Select the correct sequence of the following steps during the process of photosynthesis.

- i. Chlorophyll helps in absorbing light energy.
- ii. Light energy is converted into chemical energy and the water molecule is split into oxygen and hydrogen molecules.
- iii. Carbon dioxide is converted into carbohydrates.

- Ans**
- 1. Step i and step ii always occur together and step iii can occur any other time
 - 2. They always occur sequentially in the order i → ii → iii
 - 3. Step i occurs first and steps ii and iii occur together next
 - 4. These steps need not occur one after another immediately

Question ID : 264330181669

Option 1 ID : 264330712561

Option 2 ID : 264330712559

Option 3 ID : 264330712560

Option 4 ID : 264330712562

Status : Answered

Chosen Option : 4

Q.50 Which of the following cricketers has written the autobiography titled 'At the Close of Play'?

- Ans**
- 1. Ricky Ponting
 - 2. Matthew Hayden
 - 3. Kevin Pieterston
 - 4. Chris Gayle

Question ID : 26433066676

Option 1 ID : 264330261230

Option 2 ID : 264330261228

Option 3 ID : 264330261229

Option 4 ID : 264330261231

Status : Answered

Chosen Option : 1

Section : Reasoning

Q.1 Two statements are given followed by two conclusions numbered I and II. Assuming the statements to be true, even if they seem to be at variance with commonly known facts, decide which of the conclusions logically follow(s) from the statements.

Statements:

All bats are balls.

All balls are wickets.

Conclusions:

I. All wickets are balls.

II. All bats are wickets.

- Ans**
- 1. Neither conclusion I nor II follows
 - 2. Only conclusion II follows
 - 3. Both conclusions I and II follow
 - 4. Only conclusion I follows

Question ID : 26433045344

Option 1 ID : 264330177814

Option 2 ID : 264330177812

Option 3 ID : 264330177813

Option 4 ID : 264330177811

Status : Answered

Chosen Option : 3

Q.2 Select the set in which the numbers are related in the same way as are the numbers of the following sets.

(NOTE : Operations should be performed on the whole numbers, without breaking down the numbers into its constituent digits. E.g. 13 – Operations on 13 such as adding/deleting/multiplying etc. to 13 can be performed. Breaking down 13 into 1 and 3 and then performing mathematical operations on 1 and 3 is not allowed)

(3, 198, 6)
(5, 495, 9)

- Ans 1. (9, 1288, 12)
 2. (5, 424, 8)
 3. (4, 352, 8)
 4. (7, 827, 11)

Question ID : 26433097436

Option 1 ID : 264330382436

Option 2 ID : 264330382434

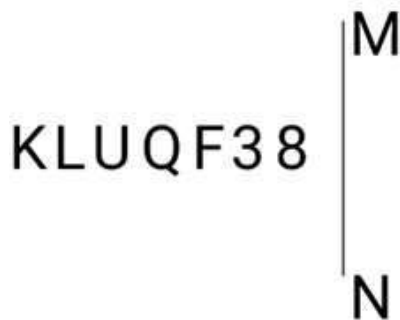
Option 3 ID : 264330382435

Option 4 ID : 264330382433

Status : Answered

Chosen Option : 3

Q.3 Select the correct mirror image of the given figure when the mirror is placed at MN as shown below.



- Ans 1. 83FQUJK
 2. 8EFQJJK
 3. 8EFQJJK
 4. 8EFQJJK

Question ID : 264330126679

Option 1 ID : 264330496388

Option 2 ID : 264330496391

Option 3 ID : 264330496389

Option 4 ID : 264330496390

Status : Answered

Chosen Option : 3

Q.4 Which figure should replace the question mark (?) if the following series were to be continued?

Y	I	L	D	O	L	Y	I	C	Y						
C	Z	D	I	C	Z	Z	D	I	L	Z	D	D	I	L	?
O	L	Y	O	C	Y	O	C	Z	O						

Ans

1.

Y	O	
L	D	I
C	Z	

2.

O	L	
Y	D	I
C	Z	

3.

O	C	
I	L	D
Y	Z	

4.

Z	L	
Y	D	I
O	C	

Question ID : 264330103896
 Option 1 ID : 264330407885
 Option 2 ID : 264330407886
 Option 3 ID : 264330407887
 Option 4 ID : 264330407888

Status : Answered

Chosen Option : 3

Q.5 Select the option that is related to the fifth letter cluster in the same way as the second letter cluster is related to the first letter cluster and the fourth letter cluster is related to the third letter cluster.

KGMQ : EQGA :: LZUD : FJON :: JRCO : ?

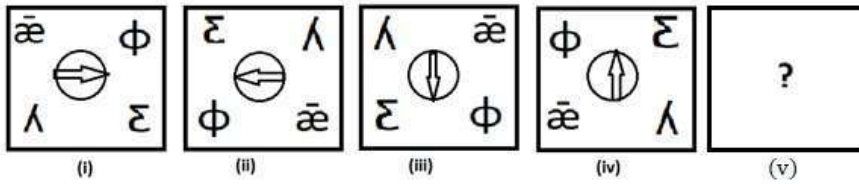
- Ans 1. DNSY
 2. DBWY
 3. KXWB
 4. KRWY

Question ID : 26433074695
 Option 1 ID : 264330292868
 Option 2 ID : 264330292869
 Option 3 ID : 264330292870
 Option 4 ID : 264330292871

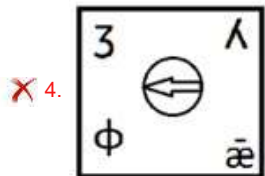
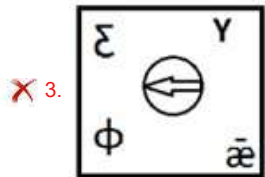
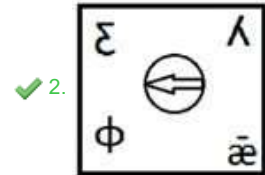
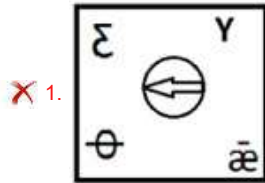
Status : Answered

Chosen Option : 2

Q.6 Select the figure from among the given options that can replace the question mark (?) in the following series.



Ans



Question ID : 264330106548

Option 1 ID : 264330418496

Option 2 ID : 264330418495

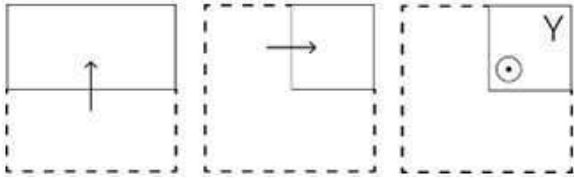
Option 3 ID : 264330418494

Option 4 ID : 264330418493

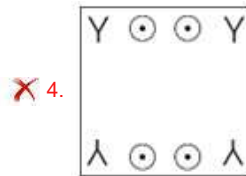
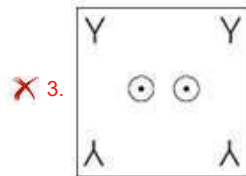
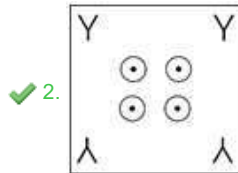
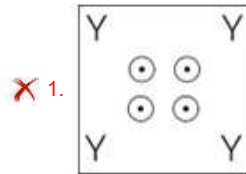
Status : Answered

Chosen Option : 3

Q.7 A paper is folded and cut as shown below. How will it appear when unfolded?



Ans



Question ID : 264330114708
 Option 1 ID : 264330450920
 Option 2 ID : 264330450919
 Option 3 ID : 264330450918
 Option 4 ID : 264330450917

Status : Answered
 Chosen Option : 2

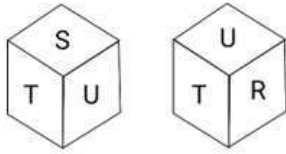
Q.8 Seven friends, Gauri, Vinod, Ridima, Jiya, Ritik, Vishal and Karishma, are sitting on a circular bench, facing towards the centre but not necessarily in the same order. Vinod and Jiya are not the neighbours of Ritik. Karishma is sitting third to the left of Ritik. Gauri is sitting to the immediate right of Karishma. Ridima is sitting to the immediate left of Ritik. Who is sitting second to the right of Gauri?

- Ans
- ✗ 1. Vinod
 - ✗ 2. Jiya
 - ✗ 3. Ridima
 - ✓ 4. Ritik

Question ID : 26433089544
 Option 1 ID : 264330351679
 Option 2 ID : 264330351677
 Option 3 ID : 264330351680
 Option 4 ID : 264330351678

Status : Answered
 Chosen Option : 4

Q.9 Six letters P, Q, R, S, T and U are written on different faces of a dice. Two positions of this dice are shown in the figure. Find the letter on the face opposite to 'R'.



- Ans**
- 1. Q
 - 2. T
 - 3. P
 - 4. S

Question ID : 264330106469

Option 1 ID : 264330418180

Option 2 ID : 264330418179

Option 3 ID : 264330418178

Option 4 ID : 264330418177

Status : Answered

Chosen Option : 4

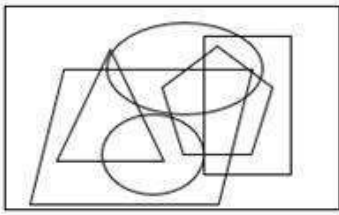


Q.10 Select the option in which the given figure is embedded. (Rotation is NOT allowed.)

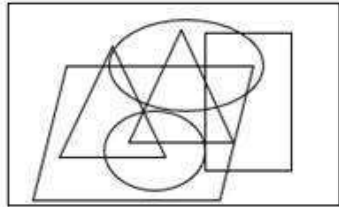


Ans

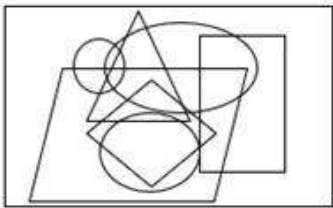
✗ 1.



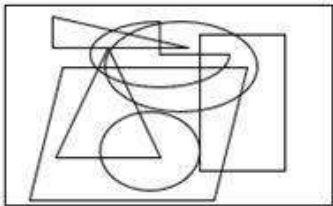
✓ 2.



✗ 3.



✗ 4.



Question ID : 26433092514

Option 1 ID : 264330363348

Option 2 ID : 264330363347

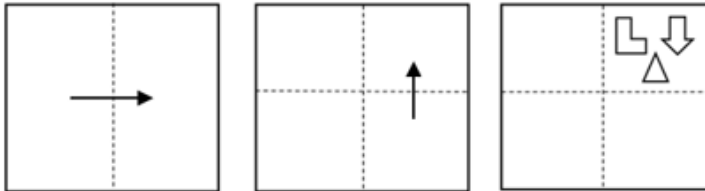
Option 3 ID : 264330363346

Option 4 ID : 264330363345

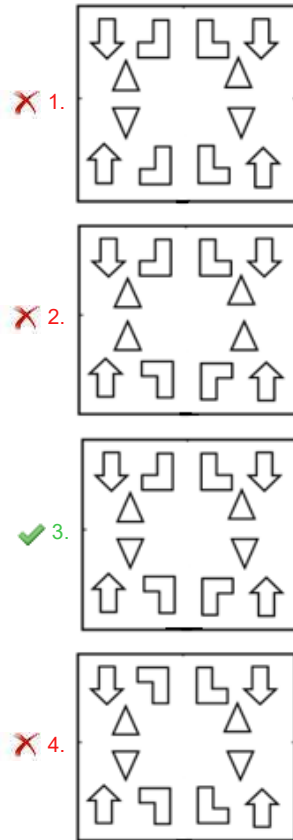
Status : Answered

Chosen Option : 2

Q.11 A paper is folded and cut as shown below. How will it appear when unfolded?



Ans



Question ID : 264330113648

Option 1 ID : 264330446680

Option 2 ID : 264330446679

Option 3 ID : 264330446678

Option 4 ID : 264330446677

Status : Answered

Chosen Option : 3

Q.12 If + means -, - means x, x means ÷ and ÷ means +, what is the value of the following expression?

$$8 - 2 + 6 \times 3 \div 5$$

Ans 1. 20

2. 21

3. 19

4. 23

Question ID : 26433085650

Option 1 ID : 264330336302

Option 2 ID : 264330336304

Option 3 ID : 264330336301

Option 4 ID : 264330336303

Status : Answered

Chosen Option : 3

Q.13 Select the correct mirror image of the given figure when the mirror is placed at PQ as shown below.

^^VV098&*()_/ |
P
Q

Ans

- ✗ 1. _)(*88e0VV^^
- ✗ 2. _()*88e0VV^^
- ✓ 3. _()*88e0VV^^
- ✗ 4. _()*880eVV^^

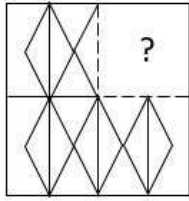
Question ID : 26433082029
Option 1 ID : 264330321951
Option 2 ID : 264330321950
Option 3 ID : 264330321952
Option 4 ID : 264330321949
Status : Answered
Chosen Option : 3

Q.14 Which of the following terms will replace the question mark (?) in the given series?
RTV, PQR, ?, LKJ, JHF

- Ans
- ✗ 1. MNO
 - ✗ 2. MNM
 - ✗ 3. NOM
 - ✓ 4. NNN

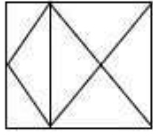
Question ID : 264330102177
Option 1 ID : 264330401176
Option 2 ID : 264330401174
Option 3 ID : 264330401175
Option 4 ID : 264330401173
Status : Answered
Chosen Option : 4

Q.15 Select the option figure that will replace the question mark (?) in the figure given below to complete the pattern.

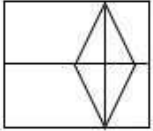


Ans

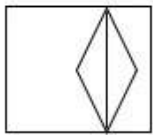
1.



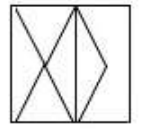
2.



3.



4.



Question ID : 26433080837
Option 1 ID : 264330317284
Option 2 ID : 264330317282
Option 3 ID : 264330317283
Option 4 ID : 264330317281

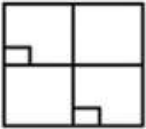
Status : Answered
Chosen Option : 4

Q.16 Select the option in which the given figure is embedded (rotation is NOT allowed).

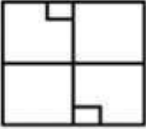


Ans

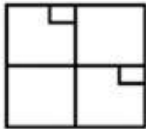
1.



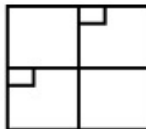
2.



3.



4.



Question ID : 264330101154

Option 1 ID : 264330397164

Option 2 ID : 264330397162

Option 3 ID : 264330397161

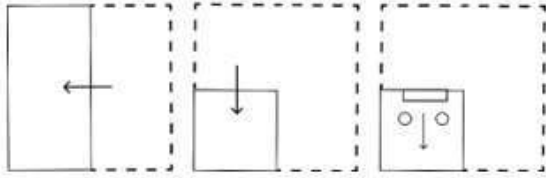
Option 4 ID : 264330397163

Status : Answered

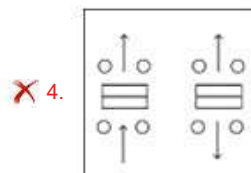
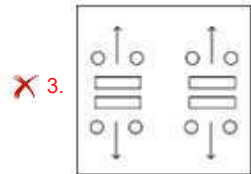
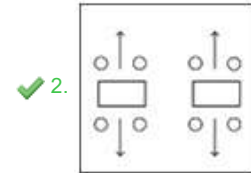
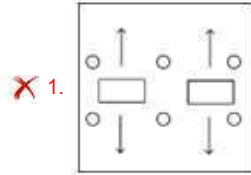
Chosen Option : 4

Adda247

Q.17 A paper is folded and cut as shown below. How will it appear when unfolded?



Ans



Question ID : 264330114710

Option 1 ID : 264330450925

Option 2 ID : 264330450927

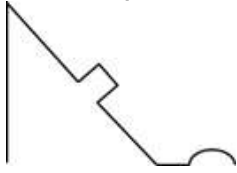
Option 3 ID : 264330450928

Option 4 ID : 264330450926

Status : Answered

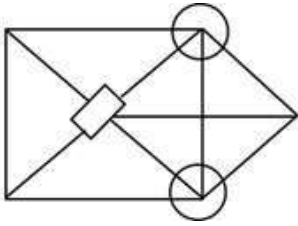
Chosen Option : 4

Q.18 Select the option in which the given figure is embedded (rotation is NOT allowed).

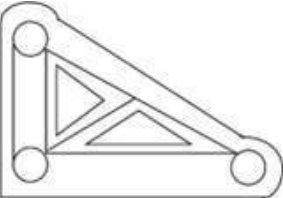


Ans

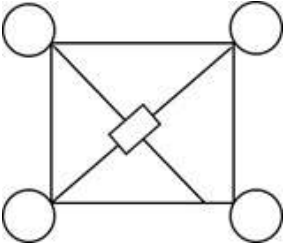
1.



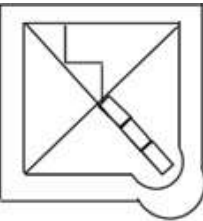
2.



3.



4.



Question ID : 264330111675

Option 1 ID : 264330438785

Option 2 ID : 264330438788

Option 3 ID : 264330438786

Option 4 ID : 264330438787

Status : Answered

Chosen Option : 3

Q.19 Select the option that is related to the third term in the same way as the second term is related to the first term and the sixth term is related to the fifth term.

5 : 45 :: 4 : ? :: 12 : 108

Ans 1. 24

2. 36

3. 40

4. 48

Question ID : 264330101040

Option 1 ID : 264330396706

Option 2 ID : 264330396705

Option 3 ID : 264330396707

Option 4 ID : 264330396708

Status : Answered

Chosen Option : 2

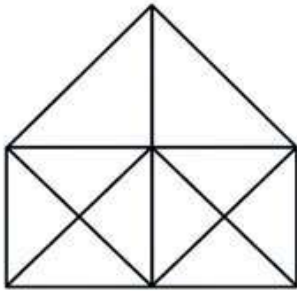
Q.20 Select the number from among the given options that can replace the question mark (?) in the following series.

7, 11, 23, 59, 167, ?

- Ans
- 1. 324
 - 2. 678
 - 3. 491
 - 4. 346

Question ID : 264330109765
Option 1 ID : 264330431338
Option 2 ID : 264330431339
Option 3 ID : 264330431337
Option 4 ID : 264330431340
Status : Answered
Chosen Option : 3

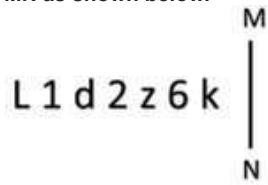
Q.21 How many triangles are there in the given figure?



- Ans
- 1. 28
 - 2. 25
 - 3. 32
 - 4. 23

Question ID : 26433080669
Option 1 ID : 264330316610
Option 2 ID : 264330316611
Option 3 ID : 264330316612
Option 4 ID : 264330316609
Status : Answered
Chosen Option : 4

Q.22 Select the correct mirror image of the given combination when the mirror is placed at MN as shown below.



Ans

✓ 1. k 6 z 2 d 1 L

✗ 2. k 6 z z 2 d 1 L

✗ 3. k 2 d 1 z 6 L

✗ 4. k 6 z 1 d 2 L

Question ID : 264330117003

Option 1 ID : 264330460095

Option 2 ID : 264330460094

Option 3 ID : 264330460096

Option 4 ID : 264330460093

Status : Answered

Chosen Option : 1

Q.23 Select the correct combination of mathematical signs to sequentially replace the * signs and to balance the given equation.

$$658 * 14 * 3 * 32 * 56 * 165$$

Ans

✗ 1. = + × - +

✓ 2. + × - + =

✗ 3. × + - + =

✗ 4. + × + - =

Question ID : 26433085728

Option 1 ID : 264330336613

Option 2 ID : 264330336614

Option 3 ID : 264330336615

Option 4 ID : 264330336616

Status : Answered

Chosen Option : 2

Q.24 Which figure should replace the question mark (?) if the series were to be continued?

6	8	2	X	6	8	8	X	6	↑	8	X	
X	♥	=	2	=	↑	↑	2	=	6	=	♥	?
	↑				♥		♥				2	

Ans

1.

8	X	♥
↑	6	=
	2	

2.

X	↑	8
♥	6	=
	2	

3.

6	↑	8
X	♥	2
	=	

4.

X	2	↑
♥	8	6
	=	

Question ID : 264330130823

Option 1 ID : 264330512405

Option 2 ID : 264330512403

Option 3 ID : 264330512406

Option 4 ID : 264330512404

Status : Answered

Chosen Option : 2

Q.25 In a certain code language, 'PENCIL' is written as 'NEPLIC' and 'ERASER' is written as 'ARERES'. How will 'GEOMETRY' be written in that language?

Ans 1. MEOGRYTE

2. MEOGR RTE

3. MOEGYRTE

4. MEOGYRET

Question ID : 26433087255

Option 1 ID : 264330342657

Option 2 ID : 264330342659

Option 3 ID : 264330342658

Option 4 ID : 264330342660

Status : Answered

Chosen Option : 3

Q.1 In a chief election, a candidate got 55% of the total valid votes. 6% of the total votes were declared invalid. If the total number of votes is 30,000, then the number of valid votes polled in favour of the candidate is:

- Ans 1. 15,510
 2. 15,000
 3. 16,000
 4. 15,500

Question ID : 264330130917
Option 1 ID : 264330512782
Option 2 ID : 264330512779
Option 3 ID : 264330512780
Option 4 ID : 264330512781
Status : Answered
Chosen Option : 1

Q.2 Namita deposited ₹9,000 which amounted to ₹10,200 after 3 years at simple interest per annum. Had the interest been 2% more, what amount (in ₹) would she get?

- Ans 1. 11400
 2. 12480
 3. 10740
 4. 11260

Question ID : 264330119524
Option 1 ID : 264330468379
Option 2 ID : 264330468380
Option 3 ID : 264330468382
Option 4 ID : 264330468381
Status : Answered
Chosen Option : 1

Q.3 Anil's income is 18% more than Ramesh's income. By what percentage is Ramesh's income less than Anil's income?

- Ans 1. 15.25%
 2. 10.25%
 3. 12.25%
 4. 18.25%

Question ID : 26433099038
Option 1 ID : 264330388791
Option 2 ID : 264330388789
Option 3 ID : 264330388790
Option 4 ID : 264330388792
Status : Answered
Chosen Option : 4

Q.4 P and Q can finish a work individually in 30 and 45 days, respectively. P starts the work and works alone for 5 days. Then Q joins him and they work together for 6 days, after which P leaves. The part of the work left at that point is:

- Ans 1. 0.5
 2. 0.6
 3. 0.2
 4. 0.4

Question ID : 264330103749
Option 1 ID : 264330407303
Option 2 ID : 264330407302
Option 3 ID : 264330407304
Option 4 ID : 264330407301
Status : Answered
Chosen Option : 1

Q.5 What is the area of a triangle whose sides are of lengths 9 cm, 40 cm and 41 cm?

- Ans 1. 170 cm^2
 2. 180 cm^2
 3. 160 cm^2
 4. 210 cm^2

Question ID : 264330119357
Option 1 ID : 264330467716
Option 2 ID : 264330467715
Option 3 ID : 264330467718
Option 4 ID : 264330467717
Status : Answered
Chosen Option : 2

Q.6 If 66 cm^3 of silver is drawn into a wire having a diameter of 2 mm, then the length of the wire, in m, will be: (Use $\pi = \frac{22}{7}$)

- Ans 1. 27
 2. 23
 3. 15
 4. 21

Question ID : 264330118114
Option 1 ID : 264330464274
Option 2 ID : 264330464272
Option 3 ID : 264330464271
Option 4 ID : 264330464273
Status : Answered
Chosen Option : 4

Q.7 A train moving at uniform speed crosses a pole in 3 seconds and a 700 m long bridge in 10 seconds. What is the speed of the train?

- Ans
- 1. 150 m/s
 - 2. 110 m/s
 - 3. 120 m/s
 - 4. 100 m/s

Question ID : 264330122990
Option 1 ID : 264330482025
Option 2 ID : 264330482026
Option 3 ID : 264330482023
Option 4 ID : 264330482024
Status : Answered
Chosen Option : 4

Q.8 Simplify $\frac{6.1 \times 61 \times 6.1 - 1}{6.1 \times 6.1 + 6.1 + 1}$.

- Ans
- 1. 3.1
 - 2. 5.1
 - 3. 4.1
 - 4. 6.1

Question ID : 264330104337
Option 1 ID : 264330409652
Option 2 ID : 264330409650
Option 3 ID : 264330409651
Option 4 ID : 264330409649
Status : Answered
Chosen Option : 4

Q.9 The average of the prime numbers between 57 and 99 (both inclusive) is:
(Rounded off to one decimal place)

- Ans
- 1. 85.6
 - 2. 75.4
 - 3. 87.7
 - 4. 79.3

Question ID : 264330112414
Option 1 ID : 264330441742
Option 2 ID : 264330441743
Option 3 ID : 264330441744
Option 4 ID : 264330441741
Status : Answered
Chosen Option : 3

Q.10 Let N be a three-digit positive integer such that the unit digit of N is prime and the product of all the digits of N is also prime. The number of possible values of N is:

- Ans
- 1. 4
 - 2. 12
 - 3. 3
 - 4. 8

Question ID : 264330111446
Option 1 ID : 264330437870
Option 2 ID : 264330437872
Option 3 ID : 264330437869
Option 4 ID : 264330437871
Status : Answered
Chosen Option : 3

Q.11 The ratio of the sixth and seventh terms of the sequence 1, 3, 6, 10, ... is:

- Ans
- 1. 4 : 3
 - 2. 3 : 5
 - 3. 5 : 3
 - 4. 3 : 4

Question ID : 264330130937
Option 1 ID : 264330512860
Option 2 ID : 264330512859
Option 3 ID : 264330512861
Option 4 ID : 264330512862
Status : Answered
Chosen Option : 4

Q.12 The average of 6 terms is 30. The first term is twice the sum of the remaining terms. Find the first term.

- Ans
- 1. 120
 - 2. 60
 - 3. 80
 - 4. 100

Question ID : 264330168540
Option 1 ID : 264330660973
Option 2 ID : 264330660974
Option 3 ID : 264330660971
Option 4 ID : 264330660972
Status : Answered
Chosen Option : 1

Q.13 A book is sold at three successive discounts of 20%, 30% and 10%. The net discount in percentage is:

- Ans
- 1. 49.60%
 - 2. 60%
 - 3. 37.60%
 - 4. 47.60%

Question ID : 264330168982
Option 1 ID : 264330662733
Option 2 ID : 264330662732
Option 3 ID : 264330662731
Option 4 ID : 264330662734
Status : Answered
Chosen Option : 1

Q.14 A moneylender borrows money at 4% per annum and pays the interest at the end of the year. He lends it at 8% per annum compound interest, compounded half-yearly, and receives the interest at the end of the year. In this way, he gains ₹166.4 a year. Find the amount of money he borrows.

- Ans
- 1. ₹4,500
 - 2. ₹6,500
 - 3. ₹5,050
 - 4. ₹4,000

Question ID : 264330104361
Option 1 ID : 264330409747
Option 2 ID : 264330409748
Option 3 ID : 264330409746
Option 4 ID : 264330409745
Status : Answered
Chosen Option : 4

Q.15 A dealer sells an item for ₹500 by making a profit of 25%. He sells another item at a loss of 10%, and on the whole, makes neither profit nor loss. What did the second item cost him?

- Ans
- 1. ₹1,000
 - 2. ₹500
 - 3. ₹750
 - 4. ₹800

Question ID : 264330118066
Option 1 ID : 264330464080
Option 2 ID : 264330464079
Option 3 ID : 264330464082
Option 4 ID : 264330464081
Status : Answered
Chosen Option : 1

Section : Computer Proficiency

Q.1 Which of the following chart types is best suited for showing trends over time?

- Ans
- 1. Line chart
 - 2. Scatter plot
 - 3. Pie chart
 - 4. Bar chart

Question ID : 264330178561
Option 1 ID : 264330700271
Option 2 ID : 264330700274
Option 3 ID : 264330700273
Option 4 ID : 264330700272
Status : Answered
Chosen Option : 1

Q.2 Which of the following options quickly changes the font of the selected text in Microsoft Word 365 without opening the Font dialog box?

- Ans
- 1. Right-click and select "Font"
 - 2. Press Ctrl + + F
 - 3. Use the Font drop-down menu on the Status bar
 - 4. Double-click the text

Question ID : 264330182788
Option 1 ID : 264330716923
Option 2 ID : 264330716924
Option 3 ID : 264330716925
Option 4 ID : 264330716926
Status : Answered
Chosen Option : 1

Q.3 The _____ symbol is employed to separate the username and domain name within an email address.

- Ans
- 1. &
 - 2. . (dot)
 - 3. @
 - 4. \$

Question ID : 264330177642
Option 1 ID : 264330696686
Option 2 ID : 264330696683
Option 3 ID : 264330696685
Option 4 ID : 264330696684
Status : Answered
Chosen Option : 3

Q.4 Which of the following is NOT a Change Case option in MS word 365?

- Ans
- 1. Sentence case
 - 2. Page case
 - 3. Uppercase
 - 4. Toggle case

Question ID : 264330177671
Option 1 ID : 264330696799
Option 2 ID : 264330696800
Option 3 ID : 264330696801
Option 4 ID : 264330696802
Status : Answered
Chosen Option : 2

Q.5 What is the primary differentiating factor between broadband and dialup connections offered by ISPs?

- Ans
- 1. Dialup connections offer higher security levels than broadband.
 - 2. Broadband provides faster internet speeds compared to dialup.
 - 3. Dialup connections are wireless, while broadband requires wired connections.
 - 4. Dialup offers unlimited data usage, unlike broadband.

Question ID : 264330178553
Option 1 ID : 264330700242
Option 2 ID : 264330700239
Option 3 ID : 264330700240
Option 4 ID : 264330700241
Status : Answered
Chosen Option : 2

Q.6 What is the purpose of the Help feature in Microsoft Word 365?

- Ans**
- 1. To provide access to online tutorials and resources
 - 2. To provide assistance in creating documents
 - 3. To allow customisation of the user interface
 - 4. To offer grammar and spelling suggestions

Question ID : 264330173598
Option 1 ID : 264330680873
Option 2 ID : 264330680871
Option 3 ID : 264330680874
Option 4 ID : 264330680872
Status : Answered
Chosen Option : 2

Q.7 How do you change the font style and size of selected text in MS-Excel 365?

- Ans**
- 1. Access the 'Home' tab, use the 'Font' group.
 - 2. Apply a new cell style to the selected text.
 - 3. Press the 'Ctrl+F' shortcut keys together.
 - 4. Right-click the text and choose 'Font'.

Question ID : 264330181817
Option 1 ID : 264330713115
Option 2 ID : 264330713118
Option 3 ID : 264330713117
Option 4 ID : 264330713116
Status : Answered
Chosen Option : 1

Q.8 Which of the following is the correct option to create a table in MS-Word 2010?

- Ans**
- 1. Home Tab -> Create Table
 - 2. Home Tab -> Insert Table
 - 3. Create Tab -> Insert Table
 - 4. Insert Tab -> Table Button

Question ID : 264330176701
Option 1 ID : 264330693022
Option 2 ID : 264330693019
Option 3 ID : 264330693021
Option 4 ID : 264330693020
Status : Answered
Chosen Option : 4

Q.9 Which of the following functions is executed in MS Word 365 when Ctrl + V is used?

- Ans**
- 1. Copy the data
 - 2. Cut the data
 - 3. Paste the data
 - 4. Select all the data

Question ID : 264330180421
Option 1 ID : 264330707653
Option 2 ID : 264330707651
Option 3 ID : 264330707652
Option 4 ID : 264330707654
Status : Answered
Chosen Option : 3

Q.10 In a worksheet, there is a list of student scores in a column. To count the number of students who scored above 90, which Excel 365 function should be used?

- Ans
- 1. COUNT
 - 2. COUNTIF
 - 3. COUNTBLANK
 - 4. COUNTA

Question ID : 264330177661

Option 1 ID : 264330696759

Option 2 ID : 264330696761

Option 3 ID : 264330696762

Option 4 ID : 264330696760

Status : Answered

Chosen Option : 2



Constable Executive Male and Female in Delhi Police Examination 2023

Roll Number	
Candidate Name	
Venue Name	iON Digital Zone iDZ 2 Sector 62
Exam Date	28/11/2023
Exam Time	12:00 PM - 1:30 PM
Subject	Constable Executive Male and Female in Delhi Police Examination 2023

Section : General Knowledge

Q.1 As per India Skills Report 2022, which Indian state got the first rank with the most employable talent?

- Ans
- 1. Goa
 - 2. Kerala
 - 3. Uttar Pradesh
 - 4. Maharashtra

Question ID : 264330177910
Option 1 ID : 264330697730
Option 2 ID : 264330697728
Option 3 ID : 264330697727
Option 4 ID : 264330697729
Status : Not Answered
Chosen Option : --

Q.2 Baishagu is celebrated in which of the following states?

- Ans
- 1. Punjab
 - 2. Assam
 - 3. Goa
 - 4. Bihar

Question ID : 264330118632
Option 1 ID : 264330465782
Option 2 ID : 264330465780
Option 3 ID : 264330465779
Option 4 ID : 264330465781
Status : Answered
Chosen Option : 1

Q.3 What do you mean by 'cant' in kabaddi?

- Ans
- 1. A player in whose court a raid is made
 - 2. A special point is given to an opponent
 - 3. A player who enters the court
 - 4. Repeating round of the word 'kabaddi'

Question ID : 264330118476
Option 1 ID : 264330465306
Option 2 ID : 264330465308
Option 3 ID : 264330465305
Option 4 ID : 264330465307
Status : Not Answered
Chosen Option : --

Q.4 Which of the following is the oldest atomic power plant of India?

- Ans 1. Tarapur
 2. Kaiga
 3. Kakrapar
 4. Narora

Question ID : 264330181282
Option 1 ID : 264330711051
Option 2 ID : 264330711054
Option 3 ID : 264330711053
Option 4 ID : 264330711052
Status : Answered
Chosen Option : 1

Q.5 Which of the following is NOT included in Article 19 of the Constitution of India?

- Ans 1. To reside and settle in any part of India
 2. To practice any profession or occupation
 3. To form associations and unions
 4. To prohibit ineligibility in respect of employment

Question ID : 264330110579
Option 1 ID : 264330434595
Option 2 ID : 264330434596
Option 3 ID : 264330434594
Option 4 ID : 264330434593
Status : Answered
Chosen Option : 4

Q.6 Where is the secretariat of the Goods and Services Tax Council located?

- Ans 1. Chandigarh
 2. Mumbai
 3. Kolkata
 4. New Delhi

Question ID : 264330173511
Option 1 ID : 264330680523
Option 2 ID : 264330680525
Option 3 ID : 264330680526
Option 4 ID : 264330680524
Status : Answered
Chosen Option : 4

Q.7 Some qualities of Samudragupta are shown on coins, such as on one of the coins he is shown playing the _____.

- Ans 1. Table
 2. sarangi
 3. veena
 4. bansuri

Question ID : 264330119756
Option 1 ID : 264330469299
Option 2 ID : 264330469302
Option 3 ID : 264330469301
Option 4 ID : 264330469300
Status : Answered
Chosen Option : 3

Q.8 Which of the following is the largest, double membrane-bound organelles, which contain all the cell's genetic information?

- Ans
- 1. Ribosome
 - 2. Peroxisomes
 - 3. Lysosome
 - 4. Nucleus

Question ID : 264330111889
Option 1 ID : 264330439641
Option 2 ID : 264330439644
Option 3 ID : 264330439643
Option 4 ID : 264330439642
Status : Answered
Chosen Option : 1

Q.9 Which of the following is NOT a central bank's function?

- Ans
- 1. Lending to commercial banks
 - 2. Banking facilities for the public
 - 3. Financial services for the government
 - 4. Lending to the government

Question ID : 264330117792
Option 1 ID : 264330462983
Option 2 ID : 264330462984
Option 3 ID : 264330462985
Option 4 ID : 264330462986
Status : Answered
Chosen Option : 2

Q.10 Which Treaty resulted in the demarcation of territories between Ranjit Singh and the East India Company?

- Ans
- 1. Lahore
 - 2. Surat
 - 3. Amritsar
 - 4. Bhaironwal

Question ID : 264330120295
Option 1 ID : 264330471433
Option 2 ID : 264330471431
Option 3 ID : 264330471434
Option 4 ID : 264330471432
Status : Answered
Chosen Option : 3

Q.11 Capital market is a market for _____ funds.

- Ans
- 1. long term
 - 2. medium term only
 - 3. short term
 - 4. both short term and long term

Question ID : 264330119659
Option 1 ID : 264330468913
Option 2 ID : 264330468912
Option 3 ID : 264330468911
Option 4 ID : 264330468914
Status : Answered
Chosen Option : 1

Q.12 As per Article 350 B of the Constitution of India, who appoints the Special Officer for Linguistic Minorities?

- Ans**
- 1. Governor
 - 2. Chief Justice of India
 - 3. Prime Minister
 - 4. President

Question ID : 264330110593
Option 1 ID : 264330434652
Option 2 ID : 264330434651
Option 3 ID : 264330434649
Option 4 ID : 264330434650
Status : Answered
Chosen Option : 4

Q.13 NITI Aayog came into existence in 2015. On which date was it formed?

- Ans**
- 1. 31st January
 - 2. 15th August
 - 3. 1st March
 - 4. 1st January

Question ID : 264330109389
Option 1 ID : 264330429834
Option 2 ID : 264330429836
Option 3 ID : 264330429835
Option 4 ID : 264330429833
Status : Answered
Chosen Option : 3

Q.14 Name the place where "independent" parallel government by Indians was established during the Quit India movement as a mark of revolt against British government.

- Ans**
- 1. Satara
 - 2. Kalpi
 - 3. Rohtak
 - 4. Kanpur

Question ID : 264330119491
Option 1 ID : 264330468250
Option 2 ID : 264330468249
Option 3 ID : 264330468247
Option 4 ID : 264330468248
Status : Answered
Chosen Option : 4

Q.15 Who proposed to pass an Act for the repair and protection of historical monuments of the country?

- Ans**
- 1. Lord Mayo
 - 2. Lord Northbrook
 - 3. Lord Curzon
 - 4. Lord Canning

Question ID : 264330119714
Option 1 ID : 264330469132
Option 2 ID : 264330469134
Option 3 ID : 264330469133
Option 4 ID : 264330469131
Status : Not Answered
Chosen Option : --

Q.16 In the popular traditions of Vijayanagara, the Deccan Sultans are termed as _____.

- Ans
- 1. Gajapati
 - 2. Narapati
 - 3. Sherapati
 - 4. Ashvapati

Question ID : 264330119485
Option 1 ID : 264330468225
Option 2 ID : 264330468224
Option 3 ID : 264330468226
Option 4 ID : 264330468223
Status : Answered
Chosen Option : 1

Q.17 When was the first edition of the Durand Cup played in India?

- Ans
- 1. 1988
 - 2. 1900
 - 3. 1880
 - 4. 1888

Question ID : 264330176081
Option 1 ID : 264330690620
Option 2 ID : 264330690621
Option 3 ID : 264330690622
Option 4 ID : 264330690619
Status : Not Answered
Chosen Option : --

Q.18 With which of the following gharanas is Ustad Bade Ghulam Ali Khan associated?

- Ans
- 1. Kirana gharana
 - 2. Patiala gharana
 - 3. Agra gharana
 - 4. Banaras gharana

Question ID : 264330116417
Option 1 ID : 264330457756
Option 2 ID : 264330457753
Option 3 ID : 264330457754
Option 4 ID : 264330457755
Status : Not Answered
Chosen Option : --

Q.19 Who conceptualised the idea about animal ecology in 1927?

- Ans
- 1. Rachel Carson
 - 2. Arthur George Tansley
 - 3. Charles Elton
 - 4. Aldo Leopold

Question ID : 264330130997
Option 1 ID : 264330513100
Option 2 ID : 264330513102
Option 3 ID : 264330513099
Option 4 ID : 264330513101
Status : Not Answered
Chosen Option : --

Q.20 What is the duration of a Kabaddi match?

- Ans
- 1. Two halves of 40 minutes, with a half time break of 5 minutes
 - 2. Two halves of 30 minutes, with a half time break of 10 minutes
 - 3. Two halves of 20 minutes, with a half time break of 5 minutes
 - 4. Two halves of 45 minutes, with a half time break of 10 minutes

Question ID : 264330113771
Option 1 ID : 264330447170
Option 2 ID : 264330447169
Option 3 ID : 264330447172
Option 4 ID : 264330447171
Status : Not Answered
Chosen Option : --

Q.21 Select the INCORRECT combination of festival and its significance.

- Ans
- 1. Eid-Milad-ul-Nabi – The birth anniversary of Prophet Muhammad
 - 2. KarvaChauth – Married women observe a fast from sunrise to moonrise
 - 3. Kartik Purnima – Marks the birth anniversary of Guru Gobind Singh
 - 4. Makar Sankranti – Also known as Uttarayana, Lohri, Pongal, Bihu and the Khichdi festival

Question ID : 264330111155
Option 1 ID : 264330436707
Option 2 ID : 264330436708
Option 3 ID : 264330436705
Option 4 ID : 264330436706
Status : Answered
Chosen Option : 4

Q.22 Fundamental duties are mentioned in which part of the Indian Constitution?

- Ans
- 1. Part III-B
 - 2. Part III-A
 - 3. Part IV-A
 - 4. Part II-A

Question ID : 264330120505
Option 1 ID : 264330472272
Option 2 ID : 264330472274
Option 3 ID : 264330472273
Option 4 ID : 264330472271
Status : Answered
Chosen Option : 3

Q.23 पुणे में लड़कियों के लिए देश के पहले स्कूल की पहली प्रधानाध्यापिका कौन थीं?

- Ans
- 1. पंडिता रमाबाई
 - 2. सावित्री बाई फुले
 - 3. एनी बेसेंट
 - 4. विजया लक्ष्मी पंडित

Question ID : 264330119013
Option 1 ID : 264330466707
Option 2 ID : 264330466709
Option 3 ID : 264330466710
Option 4 ID : 264330466708
Status : Answered
Chosen Option : 2

Q.24 Even in 1990, what proportion of the country's population continued to be employed in agriculture?

- Ans 1. 35%
2. 65%
3. 90%
4. 50%

Question ID : 264330117756
Option 1 ID : 264330462839
Option 2 ID : 264330462842
Option 3 ID : 264330462840
Option 4 ID : 264330462841
Status : Answered
Chosen Option : 2

Q.25 Which of the following dances of Assam is associated with the worship of the snake goddess Manasa?

- Ans 1. Bhor Tal Nritya
2. Deodhani
3. Jhumur
4. Bagurumba

Question ID : 264330106192
Option 1 ID : 264330417072
Option 2 ID : 264330417071
Option 3 ID : 264330417069
Option 4 ID : 264330417070
Status : Answered
Chosen Option : 4

Q.26 Which of the following dancers is associated with the following two dances - Bharatanatyam and Odissi?

- Ans 1. Shovana Narayan
2. Padma Subrahmanyam
3. Sonal Mansingh
4. Guru Bipin Singh

Question ID : 264330109301
Option 1 ID : 264330429484
Option 2 ID : 264330429482
Option 3 ID : 264330429483
Option 4 ID : 264330429481
Status : Answered
Chosen Option : 3

Q.27 Gulabo, a world-renowned dancer, is best known for which of the following dance forms?

- Ans
- 1. Pandwani
 - 2. Ghoomar
 - 3. Panthi
 - 4. Kalbeliya

Question ID : 264330110439
Option 1 ID : 264330434033
Option 2 ID : 264330434036
Option 3 ID : 264330434034
Option 4 ID : 264330434035
Status : Not Answered
Chosen Option : --

Q.28 What kind of image does the eye lens form of the object on the retina?

- Ans
- 1. Inverted real image
 - 2. No image
 - 3. Real and opaque image
 - 4. Inverted virtual image

Question ID : 264330135588
Option 1 ID : 264330531251
Option 2 ID : 264330531253
Option 3 ID : 264330531254
Option 4 ID : 264330531252
Status : Not Answered
Chosen Option : --

Q.29 Liberalisation means:

- Ans
- 1. increase in restrictions on imports and exports
 - 2. increase in control of government over the private sector
 - 3. reduction in control of government over the private sector
 - 4. free play of market forces in all sectors with no controls

Question ID : 264330109131
Option 1 ID : 264330428804
Option 2 ID : 264330428802
Option 3 ID : 264330428801
Option 4 ID : 264330428803
Status : Answered
Chosen Option : 3

Q.30 Which of the following movements is included in volcanism?

- Ans
- 1. Molten rock
 - 2. Sedimentary rocks
 - 3. Hard rocks
 - 4. Metamorphic rock

Question ID : 264330119717
Option 1 ID : 264330469146
Option 2 ID : 264330469145
Option 3 ID : 264330469144
Option 4 ID : 264330469143
Status : Answered
Chosen Option : 1

Q.31 According to the Ministry of Commerce and Industry 2022, which state is the largest producer of grapes?

- Ans
- 1. Maharashtra
 - 2. Andhra Pradesh
 - 3. West Bengal
 - 4. Arunachal Pradesh

Question ID : 264330173601
Option 1 ID : 264330680884
Option 2 ID : 264330680886
Option 3 ID : 264330680883
Option 4 ID : 264330680885
Status : Answered
Chosen Option : 1

Q.32 The 'Mission Solar Charkha' scheme was launched in the year 2018 by _____ of the Government of India.

- Ans
- 1. Ministry of Skill Development and Entrepreneurship
 - 2. Ministry of Commerce and Industry
 - 3. Ministry of Rural Development
 - 4. Ministry of Micro, Small and Medium Enterprises

Question ID : 264330120344
Option 1 ID : 264330471629
Option 2 ID : 264330471628
Option 3 ID : 264330471627
Option 4 ID : 264330471630
Status : Not Answered
Chosen Option : --

Q.33 Which of the following countries is the second most populous country in South Asia?

- Ans
- 1. Bangladesh
 - 2. Nepal
 - 3. Afghanistan
 - 4. Pakistan

Question ID : 264330183026
Option 1 ID : 264330717838
Option 2 ID : 264330717839
Option 3 ID : 264330717837
Option 4 ID : 264330717836
Status : Answered
Chosen Option : 4

Q.34 Which of the following committees observed that "essentially all that is contained in the fundamental duties is just a codification of tasks integral to the Indian way of life"?

- Ans
- 1. Rangrajan committee
 - 2. Santhanam Committee
 - 3. Verma Committee
 - 4. Moily committee

Question ID : 264330133050
Option 1 ID : 264330521254
Option 2 ID : 264330521251
Option 3 ID : 264330521252
Option 4 ID : 264330521253
Status : Not Answered
Chosen Option : --

Q.35 Which of the following Constitutional Amendment Acts has created the Union territories in India?

- Ans
- 1. 5th
 - 2. 7th
 - 3. 4th
 - 4. 6th

Question ID : 264330120190
Option 1 ID : 264330471016
Option 2 ID : 264330471018
Option 3 ID : 264330471015
Option 4 ID : 264330471017
Status : Not Answered
Chosen Option : --

Q.36 Which of the following area pair of barrel-shaped organelles located in the cytoplasm of animal cells near the nuclear envelope, which give orientation to the 'mitotic spindle' formed during cell division?

- Ans
- 1. Centrioles
 - 2. Flagella
 - 3. Centrosomes
 - 4. Basal bodies

Question ID : 26433064276
Option 1 ID : 264330251698
Option 2 ID : 264330251699
Option 3 ID : 264330251697
Option 4 ID : 264330251696
Status : Not Answered
Chosen Option : --

Q.37 The Ministry of Rural Development had launched 'Garib Kalyan Rozgar Abhiyan' in 2020 to provide immediate employment and livelihood opportunities to returnee migrants and rural population. From which state was the scheme launched?

- Ans
- 1. Bihar
 - 2. Uttar Pradesh
 - 3. Gujarat
 - 4. Rajasthan

Question ID : 264330111583
Option 1 ID : 264330438419
Option 2 ID : 264330438418
Option 3 ID : 264330438417
Option 4 ID : 264330438420
Status : Not Answered
Chosen Option : --

Q.38 Who among the following is a Padma Vibhushan awardee and a torch bearer of the Kalka-Bindadin Gharana of Lucknow?

- Ans 1. Pandit Birju Maharaj
 2. Pandit Lacchu Maharaj
 3. Pandit Gopi Krishna
 4. Pandit Shambhu Maharaj

Question ID : 264330111795
Option 1 ID : 264330439268
Option 2 ID : 264330439265
Option 3 ID : 264330439266
Option 4 ID : 264330439267
Status : Answered
Chosen Option : 1

Q.39 In which of the following years did India host the Asian Games?

- Ans 1. 1951 and 1982
 2. 1951 and 1985
 3. 1955 and 1982
 4. 1960 and 1983

Question ID : 264330118465
Option 1 ID : 264330465262
Option 2 ID : 264330465263
Option 3 ID : 264330465261
Option 4 ID : 264330465264
Status : Answered
Chosen Option : 1

Q.40 Atal Bhujal Yojana (Atal Jal) is targeted at sustainable _____ management.

- Ans 1. groundwater
 2. pollution
 3. green
 4. waste

Question ID : 264330110016
Option 1 ID : 264330432342
Option 2 ID : 264330432343
Option 3 ID : 264330432344
Option 4 ID : 264330432341
Status : Answered
Chosen Option : 1

Q.41 Megasthenes, a Greek, was the ambassador in the court of which of the following kings?

- Ans 1. Ashoka
 2. Chandragupta Maurya
 3. Bimbisara
 4. Mahapadma Nanda

Question ID : 264330118950
Option 1 ID : 264330466456
Option 2 ID : 264330466455
Option 3 ID : 264330466458
Option 4 ID : 264330466457
Status : Answered
Chosen Option : 2

Q.42 The Kathiawar Peninsula is a part of which state of India?

- Ans 1. West Bengal
 2. Tamil Nadu
 3. Gujarat
 4. Andhra Pradesh

Question ID : 264330181257
Option 1 ID : 264330710953
Option 2 ID : 264330710952
Option 3 ID : 264330710951
Option 4 ID : 264330710954
Status : Not Answered
Chosen Option : --

Q.43 Who among the following was the Sultan of Delhi sultanate from 1296 A.D. to 1316 A.D.?

- Ans 1. Ghiyasuddin Balban
 2. Ghiyasuddin Tughluq
 3. Alauddin Khalji
 4. Khizr Khan

Question ID : 264330114078
Option 1 ID : 264330448399
Option 2 ID : 264330448397
Option 3 ID : 264330448400
Option 4 ID : 264330448398
Status : Answered
Chosen Option : 3

Q.44 To which of the following places would a school teacher take her students for a field trip to see Hoshang Shah's tomb, Hindola Mahal, Champa Baoli and Jahaaz Mahal?

- Ans 1. Mandu, Madhya Pradesh
 2. Varanasi, Uttar Pradesh
 3. Agra, Uttar Pradesh
 4. Ratlam, Madhya Pradesh

Question ID : 264330141819
Option 1 ID : 264330555596
Option 2 ID : 264330555595
Option 3 ID : 264330555597
Option 4 ID : 264330555598
Status : Not Answered
Chosen Option : --

Q.45 'My Dateless Diary' is a novel written by whom among the following authors?

- Ans 1. Robin Singh
 2. RK Narayan
 3. Ruskin Bond
 4. Chetan Bhagat

Question ID : 264330112865
Option 1 ID : 264330443546
Option 2 ID : 264330443547
Option 3 ID : 264330443545
Option 4 ID : 264330443548
Status : Answered
Chosen Option : 4

Q.46 Which Article of the Constitution of India mentions that "it shall be the duty of every citizen of India to promote harmony and the spirit of common brotherhood amongst all the people of India transcending religious, linguistic and regional or sectional diversities; to renounce practices derogatory to the dignity of women"?

- Ans
- 1. 51A (k)
 - 2. 51A (e)
 - 3. 51A (d)
 - 4. 51A (a)

Question ID : 264330133057
Option 1 ID : 264330521282
Option 2 ID : 264330521279
Option 3 ID : 264330521281
Option 4 ID : 264330521280
Status : Not Answered
Chosen Option : --

Q.47 Which of the following earthquake waves is more destructive?

- Ans
- 1. Body Waves
 - 2. S-Waves
 - 3. Surface waves
 - 4. P-Waves

Question ID : 264330134902
Option 1 ID : 264330528546
Option 2 ID : 264330528544
Option 3 ID : 264330528545
Option 4 ID : 264330528543
Status : Not Answered
Chosen Option : --

Q.48 Which of the following palaces is located in Mysore, Karnataka?

- Ans
- 1. Kowdiar Palace
 - 2. Amba Vilas Palace
 - 3. Ujjayanta Palace
 - 4. Kangla Palace

Question ID : 264330141820
Option 1 ID : 264330555602
Option 2 ID : 264330555599
Option 3 ID : 264330555600
Option 4 ID : 264330555601
Status : Not Answered
Chosen Option : --

Q.49 Who among the following physicists wrote an autobiography 'Autobiographical Notes'?

- Ans
- 1. Michael Faraday
 - 2. Albert Einstein
 - 3. Isaac Newton
 - 4. James Maxwell

Question ID : 26433086905
Option 1 ID : 264330341264
Option 2 ID : 264330341261
Option 3 ID : 264330341262
Option 4 ID : 264330341263
Status : Not Answered
Chosen Option : --

Q.50 Who among the following was a renowned pianist and founder of the Shillong Chamber Choir?

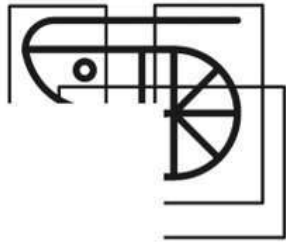
- Ans
- 1. Damon Lyndem
 - 2. Kynsai Lyngdoh
 - 3. William Basaiawmoit
 - 4. Neil Nongkynrih

Question ID : 264330110252
Option 1 ID : 264330433286
Option 2 ID : 264330433288
Option 3 ID : 264330433285
Option 4 ID : 264330433287
Status : Not Answered
Chosen Option : --

Section : Reasoning

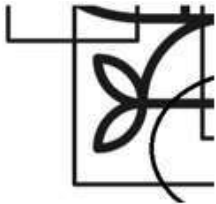
Adda247

Q.1 Which of the following option figures will complete the pattern in the figure given below?




Ans

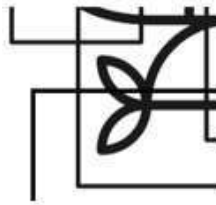
1.



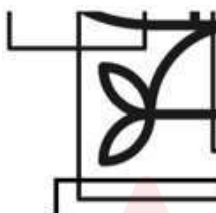
2.



3.



4.



Question ID : 26433080634

Option 1 ID : 264330316471

Option 2 ID : 264330316469

Option 3 ID : 264330316470

Option 4 ID : 264330316472

Status : Answered

Chosen Option : 2

Q.2 Which two signs should be interchanged to make the following equation correct?

$$36 - 9 \times 15 + 8 \div 3 = 65$$

Ans 1. + and ×

2. + and ×

3. - and +

4. - and +

Question ID : 264330101088

Option 1 ID : 264330396900

Option 2 ID : 264330396897

Option 3 ID : 264330396899

Option 4 ID : 264330396898

Status : Answered

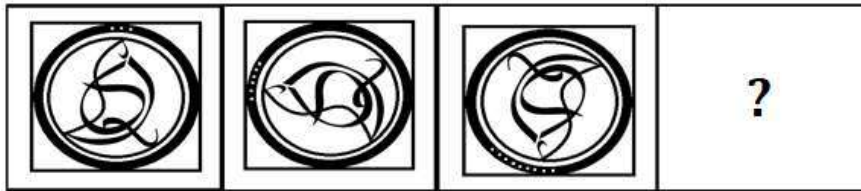
Chosen Option : 3

Q.3 In a certain code language, 'DESK' is written as '23179' and 'FLOW' is written as '4101321'. How will 'HUNT' be written in that language?

- Ans
- ✓ 1. 6191218
 - ✗ 2. 6111219
 - ✗ 3. 5998795
 - ✗ 4. 5894566

Question ID : 26433089419
Option 1 ID : 264330351180
Option 2 ID : 264330351179
Option 3 ID : 264330351178
Option 4 ID : 264330351177
Status : Answered
Chosen Option : 1

Q.4 Select the figure that will come next in the following figure series.



Ans

- ✓ 1.
- ✗ 2.
- ✗ 3.
- ✗ 4.

Question ID : 264330129651
Option 1 ID : 264330507970
Option 2 ID : 264330507971
Option 3 ID : 264330507973
Option 4 ID : 264330507972
Status : Answered
Chosen Option : 1

Q.5 Select the option that is related to the third word in the same way as the second word is related to the first word. (The words must be considered as meaningful English words and must NOT be related to each other based on the number of letters/number of consonants/vowels in the word)

Snow : Mountain :: Sand : ?

Ans 1. Beach

2. Sun

3. Water

4. Bucket

Question ID : 26433069141

Option 1 ID : 264330271079

Option 2 ID : 264330271076

Option 3 ID : 264330271078

Option 4 ID : 264330271077

Status : Answered

Chosen Option : 1

Q.6 Which of the following option figures will complete the pattern in the figure given below?



Ans

1.



2.



3.



4.



Question ID : 26433089626

Option 1 ID : 264330352005

Option 2 ID : 264330352007

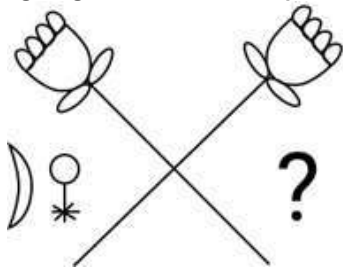
Option 3 ID : 264330352008

Option 4 ID : 264330352006

Status : Answered

Chosen Option : 1

Q.7 Select the figure from the given options that will replace the question mark (?) in the figure given below and complete the pattern.



Ans



Question ID : 264330111717

Option 1 ID : 264330438954

Option 2 ID : 264330438953

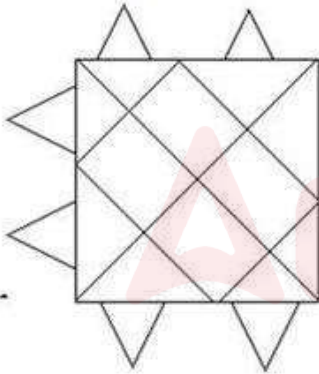
Option 3 ID : 264330438956

Option 4 ID : 264330438955

Status : Answered

Chosen Option : 1

Q.8 How many triangles are there in the given figure?



Ans ✗ 1. 24

✗ 2. 22

✓ 3. 26

✗ 4. 28

Question ID : 26433078989

Option 1 ID : 264330309969

Option 2 ID : 264330309968

Option 3 ID : 264330309970

Option 4 ID : 264330309971

Status : Answered

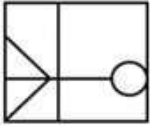
Chosen Option : 2

Q.9 Select the option in which the given figure is embedded (rotation is NOT allowed).

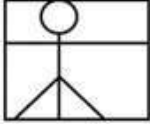


Ans

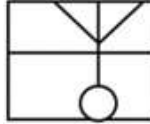
1.



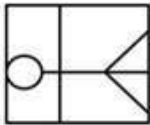
2.



3.



4.



Question ID : 264330101161

Option 1 ID : 264330397191

Option 2 ID : 264330397189

Option 3 ID : 264330397192

Option 4 ID : 264330397190

Status : Answered

Chosen Option : 3

Q.10 Select the correct combination of mathematical signs to sequentially replace the * signs and to balance the given equation.

$$99 * 11 * 5 * 25 * 15 * 5$$

Ans 1. $+ - \times = +$

2. $- + \times + =$

3. $+ \times - = +$

4. $+ - \times + =$

Question ID : 26433085717

Option 1 ID : 264330336569

Option 2 ID : 264330336572

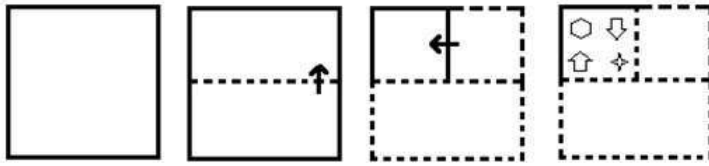
Option 3 ID : 264330336570

Option 4 ID : 264330336571

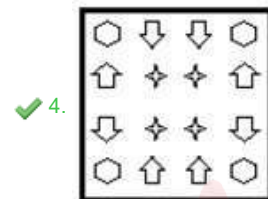
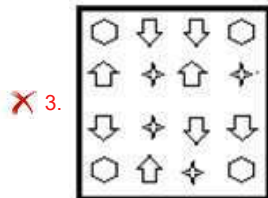
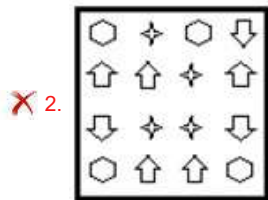
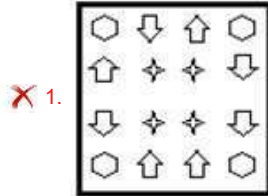
Status : Answered

Chosen Option : 3

Q.11 The sequence of folding a piece of paper and the manner in which the folded paper is cut is shown in the following figures. How would this paper look when unfolded?



Ans



Question ID : 26433074795

Option 1 ID : 264330293268

Option 2 ID : 264330293270

Option 3 ID : 264330293269

Option 4 ID : 264330293271

Status : Answered

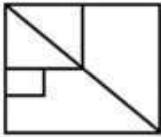
Chosen Option : 4

Q.12 Select the option in which the given figure is embedded (rotation is NOT allowed).



Ans

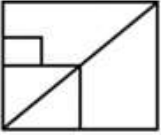
✓ 1.



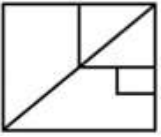
✗ 2.



✗ 3.



✗ 4.



Question ID : 264330101163

Option 1 ID : 264330397198

Option 2 ID : 264330397200

Option 3 ID : 264330397199

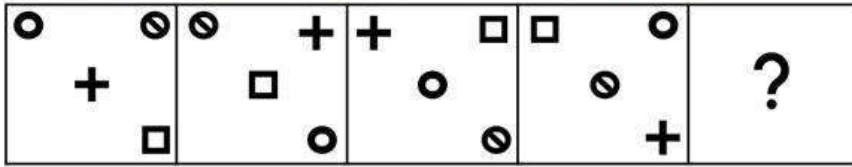
Option 4 ID : 264330397197

Status : Answered

Chosen Option : 1

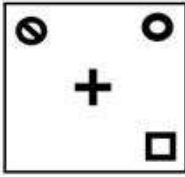
Adda247

Q.13 Select the figure that will come next in the following figure series.

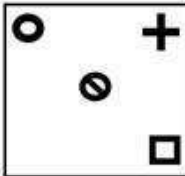


Ans

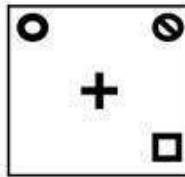
✗ 1.



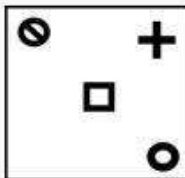
✗ 2.



✓ 3.



✗ 4.



Question ID : 26433076496

Option 1 ID : 264330300050

Option 2 ID : 264330300048

Option 3 ID : 264330300049

Option 4 ID : 264330300051

Status : Answered

Chosen Option : 3

Q.14 छह विद्यार्थी एक गोल मेज के परितः केंद्र की ओर अभिमुख होकर बैठे हैं। अदिति और अमोल दोनों का निकटतम पड़ोसी अभय है। आभा, अदिति के दाएं से दूसरे स्थान पर बैठी है। अब्दुल, अमोल के दाएं से तीसरे स्थान पर बैठा है। आशना, अभय के बाएं से दूसरे स्थान पर बैठी है। अदिति और आभा दोनों का निकटतम पड़ोसी कौन है?

Ans ✗ 1. अमोल

✓ 2. अब्दुल

✗ 3. अभय

✗ 4. आशना

Question ID : 264330110712

Option 1 ID : 264330435125

Option 2 ID : 264330435127

Option 3 ID : 264330435128

Option 4 ID : 264330435126

Status : Answered

Chosen Option : 2

Q.15 Read the given statements and conclusions carefully. Assuming that the information given in the statements is true, even if it appears to be at variance with commonly known facts, decide which of the given conclusions logically follow(s) from the statements.

Statements:

- All peacocks are lion.
- Some lions are dogs.
- No dog is a cat.

Conclusions:

- Some lions are not cats.
- Some peacocks are dogs.
- Some peacocks are not lion.

- Ans
- 1. Conclusions I, II and III follow
 - 2. Only conclusion III follows
 - 3. Only conclusion I follows
 - 4. Only conclusion II and III follow

Question ID : 26433078848

Option 1 ID : 264330309405

Option 2 ID : 264330309407

Option 3 ID : 264330309404

Option 4 ID : 264330309406

Status : Answered

Chosen Option : 4

Q.16 Select the set in which the numbers are related in the same way as are the numbers of the following sets.

(NOTE : Operations should be performed on the whole numbers, without breaking down the numbers into its constituent digits. E.g. 13 – Operations on 13 such as adding /deleting /multiplying etc. to 13 can be performed. Breaking down 13 into 1 and 3 and then performing mathematical operations on 1 and 3 is NOT allowed)
(49, 12), (81, 14)

- Ans
- 1. (400, 22)
 - 2. (169, 14)
 - 3. (144, 20)
 - 4. (361, 24)

Question ID : 26433052040

Option 1 ID : 264330203465

Option 2 ID : 264330203462

Option 3 ID : 264330203464

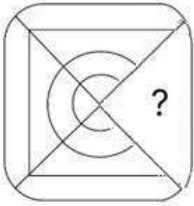
Option 4 ID : 264330203463

Status : Answered

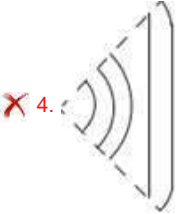
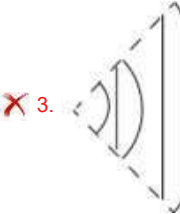
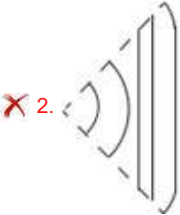
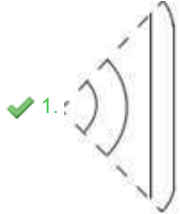
Chosen Option : 4

Q.17

Select the option figure that will replace the question mark (?) in the figure given below to complete the pattern.



Ans



Question ID : 264330117031

Option 1 ID : 264330460207

Option 2 ID : 264330460205

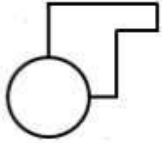
Option 3 ID : 264330460208

Option 4 ID : 264330460206

Status : Answered

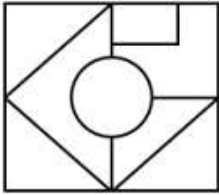
Chosen Option : 1

Q.18 Select the option in which the given figure is embedded (rotation is NOT allowed).

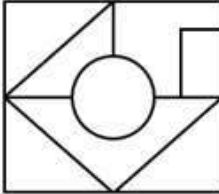


Ans

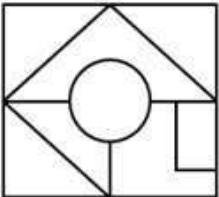
✗ 1.



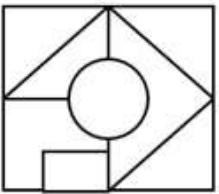
✓ 2.



✗ 3.



✗ 4.



Question ID : 264330106332

Option 1 ID : 264330417629

Option 2 ID : 264330417632

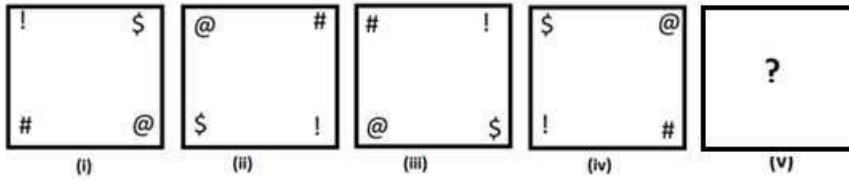
Option 3 ID : 264330417631

Option 4 ID : 264330417630

Status : Answered

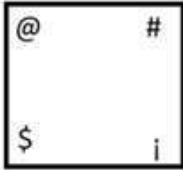
Chosen Option : 2

Q.19 Select the figure from among the given options that can replace the question mark (?) in the following series.




Ans


✗ 1.




✓ 2.



✗ 3.



✗ 4.



Question ID : 264330106544
Option 1 ID : 264330418480
Option 2 ID : 264330418479
Option 3 ID : 264330418478
Option 4 ID : 264330418477
Status : Answered
Chosen Option : 2

Q.20 Which of the following terms will replace the question mark (?) in the given series?

CNWF, FMZE, ?, LKFC, OJIB

Ans ✓ 1. ILCD

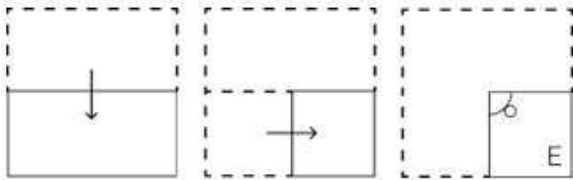
✗ 2. CMBE

✗ 3. CNCD

✗ 4. IIBC

Question ID : 26433090969
Option 1 ID : 264330357287
Option 2 ID : 264330357288
Option 3 ID : 264330357286
Option 4 ID : 264330357285
Status : Answered
Chosen Option : 1

Q.21 A paper is folded and cut as shown below. How will it appear when unfolded?



Ans

- 1.
- 2.
- 3.
- 4.

Question ID : 264330114703

Option 1 ID : 264330450897

Option 2 ID : 264330450899

Option 3 ID : 264330450898

Option 4 ID : 264330450900

Status : Answered

Chosen Option : 2

Q.22 Select the option that is related to the third term in the same way as the second term is related to the first term and the sixth term is related to the fifth term.
 $12 : 169 :: 15 : ? :: 25 : 676$

- Ans
- 1. 256
 - 2. 196
 - 3. 225
 - 4. 289

Question ID : 264330101047

Option 1 ID : 264330396733

Option 2 ID : 264330396735

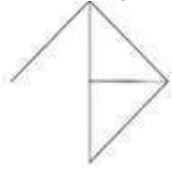
Option 3 ID : 264330396734

Option 4 ID : 264330396736

Status : Answered

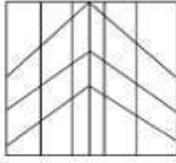
Chosen Option : 1

Q.23 Select the option in which the given figure is embedded (rotation is NOT allowed).

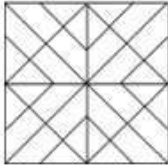


Ans

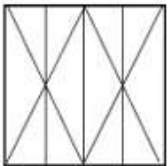
1.



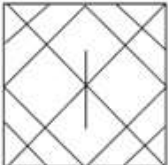
2.



3.



4.



Question ID : 264330114257

Option 1 ID : 264330449114

Option 2 ID : 264330449115

Option 3 ID : 264330449116

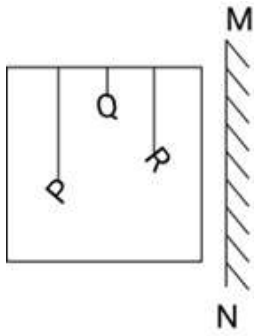
Option 4 ID : 264330449113

Status : Answered

Chosen Option : 2

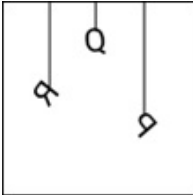
Adda247

Q.24 Select the correct mirror image of the given combination when the mirror is placed at 'MN' as shown below.

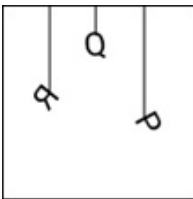


Ans

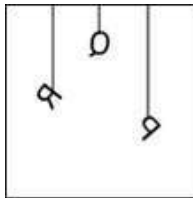
1.



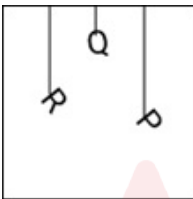
2.



3.



4.



Question ID : 264330130765

Option 1 ID : 264330512173

Option 2 ID : 264330512174

Option 3 ID : 264330512172

Option 4 ID : 264330512171

Status : Answered

Chosen Option : 3

Q.25 Select the number from among the given options that can replace the question mark (?) in the following series.

10, 22, 13, 28, 16, ?

- Ans 1. 67
 2. 34
 3. 78
 4. 43

Question ID : 264330109754
Option 1 ID : 264330431295
Option 2 ID : 264330431293
Option 3 ID : 264330431296
Option 4 ID : 264330431294
Status : Answered
Chosen Option : 2

Section : Numerical Ability

Q.1 वह सबसे बड़ी संख्या _____ होगी, जिससे 275 और 146 को भाग देने पर क्रमशः 5 और 6 शेषफल आता है।

- Ans 1. 12
 2. 10
 3. 8
 4. 15

Question ID : 264330109326
Option 1 ID : 264330429583
Option 2 ID : 264330429582
Option 3 ID : 264330429581
Option 4 ID : 264330429584
Status : Answered
Chosen Option : 3

Q.2 एक दुकानदार अपने सहयोगी को 12% लाभ अर्जित करने के लिए एक वस्तु पर ₹152 का विक्रय मूल्य टैग लगाने के लिए कहता है। गलती से, सहयोगी ₹125 का मूल्य टैग लगा देता है। नए विक्रय मूल्य टैग से दुकानदार का हानि या लाभ प्रतिशत (दो दशमलव स्थानों तक पूर्णांकित) क्या है?

- Ans 1. 6.99% लाभ
 2. 7.89% हानि
 3. 9.66% लाभ
 4. 8.77% हानि

Question ID : 264330117913
Option 1 ID : 264330463467
Option 2 ID : 264330463469
Option 3 ID : 264330463468
Option 4 ID : 264330463470
Status : Not Answered
Chosen Option : --

Q.3 एक वस्तु को ₹1,800 में बेचने से प्राप्त प्रतिशत लाभ उसी वस्तु को ₹1,160 में बेचने पर हुई हानि के प्रतिशत के बराबर है। 20% का लाभ प्राप्त के लिए वस्तु को किस मूल्य पर बेचा जाना चाहिए?

Ans 1. ₹1,776

2. ₹1,650

3. ₹1,550

4. ₹1,480

Question ID : 264330109336

Option 1 ID : 264330429624

Option 2 ID : 264330429623

Option 3 ID : 264330429622

Option 4 ID : 264330429621

Status : Not Answered

Chosen Option : --

Q.4 यदि 78, 104, 338 का HCF, A है और 136, 357 का HCF, B है, तो A + B का मान ज्ञात कीजिए।

Ans 1. 43

2. 38

3. 56

4. 39

Question ID : 264330103682

Option 1 ID : 264330407036

Option 2 ID : 264330407034

Option 3 ID : 264330407035

Option 4 ID : 264330407033

Status : Answered

Chosen Option : 1

Q.5 The price of tea has decreased by 15%. By what percentage can a person increase the consumption of tea so that there is no change in the expenditure?

Ans 1. $18\frac{7}{18}$

2. $17\frac{11}{17}$

3. $19\frac{7}{19}$

4. $16\frac{11}{16}$

Question ID : 264330130227

Option 1 ID : 264330510022

Option 2 ID : 264330510021

Option 3 ID : 264330510020

Option 4 ID : 264330510019

Status : Not Answered

Chosen Option : --

Q.6 The length of a diagonal of a quadrilateral is 30 m and length of the perpendiculars from two vertices to the diagonal are 15 m and 25 m. Find the area of the quadrilateral.

- Ans
- 1. 325 m^2
 - 2. 600 m^2
 - 3. 300 m^2
 - 4. 250 m^2

Question ID : 264330111488
Option 1 ID : 264330438040
Option 2 ID : 264330438038
Option 3 ID : 264330438039
Option 4 ID : 264330438037
Status : Not Answered
Chosen Option : --

Q.7 If $a : b = 9 : 14$ and $b : c = 16 : 7$, then what is $a : b : c$?

- Ans
- 1. $72 : 112 : 49$
 - 2. $72 : 102 : 49$
 - 3. $9 : 112 : 49$
 - 4. $9 : 112 : 7$

Question ID : 264330129424
Option 1 ID : 264330507062
Option 2 ID : 264330507065
Option 3 ID : 264330507063
Option 4 ID : 264330507064
Status : Answered
Chosen Option : 1

Q.8 The ratio of the radius and the height of a cone is $5 : 18$. If its volume is $1,61,700 \text{ cm}^3$, find its slant height (in cm).

(Take $\pi = \frac{22}{7}$)

- Ans
- 1. $\sqrt{27101}$
 - 2. $\sqrt{17108}$
 - 3. $\sqrt{17101}$
 - 4. $\sqrt{27108}$

Question ID : 264330112434
Option 1 ID : 264330441821
Option 2 ID : 264330441823
Option 3 ID : 264330441822
Option 4 ID : 264330441824
Status : Not Answered
Chosen Option : --

Q.9 In how much time will ₹800 amount to ₹926.10 at 10% per annum, compounded half-yearly?

- Ans 1. 1 year
 2. $1\frac{1}{2}$ years
 3. $2\frac{1}{2}$ years
 4. 2 years

Question ID : 264330104197
Option 1 ID : 264330409089
Option 2 ID : 264330409090
Option 3 ID : 264330409092
Option 4 ID : 264330409091
Status : Answered
Chosen Option : 2

Q.10 नितीश अपने माल पर लागत मूल्य से 20% अधिक मूल्य अंकित करता है लेकिन नकद भुगतान पर 15% की छूट देता है। यदि वह वस्तु को ₹1,020 में बेचता है, तो उसका क्रय मूल्य (₹ में) ज्ञात कीजिए।

- Ans 1. 1109
 2. 1000
 3. 1200
 4. 1300

Question ID : 264330108886
Option 1 ID : 264330427824
Option 2 ID : 264330427822
Option 3 ID : 264330427823
Option 4 ID : 264330427821
Status : Answered
Chosen Option : 2

Q.11 एक परिवार में दादा-दादी, माता-पिता और दो पोते-पोतियां हैं। पोते-पोतियों की औसत आयु 12 वर्ष, माता-पिता की औसत आयु 40 वर्ष और दादा-दादी की औसत आयु 68 वर्ष है। परिवार की औसत आयु की गणना करें।

- Ans 1. 40 वर्ष
 2. 30 वर्ष
 3. 35 वर्ष
 4. 45 वर्ष

Question ID : 264330126556
Option 1 ID : 264330495897
Option 2 ID : 264330495898
Option 3 ID : 264330495899
Option 4 ID : 264330495896
Status : Answered
Chosen Option : 1

Q.12 यदि रमेश 25 km/h की चाल से स्कूल जाता है तो वह 9 मिनट की देरी से पहुँचता है। यदि वह 30 km/h की चाल से चलता है, तो वह 9 मिनट पहले पहुँचता है। उसके घर और स्कूल के बीच की दूरी ज्ञात कीजिए।

- Ans 1. 40 km
 2. 45 km
 3. 48 km
 4. 43 km

Question ID : 264330104320
Option 1 ID : 264330409581
Option 2 ID : 264330409583
Option 3 ID : 264330409584
Option 4 ID : 264330409582
Status : Answered
Chosen Option : 2

Q.13 Krisha alone takes 4 hours more to complete a job than if both Krisha and Krupa work together. If Krupa works alone, she takes 9 hours more to complete the job than if Krisha and Krupa worked together. What time would they take to complete the job if both Krisha and Krupa worked together?

- Ans 1. 6 hours
 2. 9 hours
 3. 7 hours
 4. 8 hours

Question ID : 264330103631
Option 1 ID : 264330406829
Option 2 ID : 264330406832
Option 3 ID : 264330406830
Option 4 ID : 264330406831
Status : Not Answered
Chosen Option : --

Q.14 किसी निश्चित धनराशि पर 5% वार्षिक दर से 9 वर्ष के लिए साधारण ब्याज ₹1,260 है। किस ब्याज दर पर 5 वर्ष बाद समान धनराशि पर समान ब्याज प्राप्त किया जा सकता है?

- Ans 1. 10%
 2. 9%
 3. 8.6%
 4. 11%

Question ID : 264330118129
Option 1 ID : 264330464332
Option 2 ID : 264330464333
Option 3 ID : 264330464331
Option 4 ID : 264330464334
Status : Answered
Chosen Option : 2

Q.15 Which of the following numbers is greater than the sum of all the prime factors of 2145?

- Ans 1. 41
 2. 32
 3. 31
 4. 29

Question ID : 264330109531
Option 1 ID : 264330430404
Option 2 ID : 264330430403
Option 3 ID : 264330430402
Option 4 ID : 264330430401
Status : Answered
Chosen Option : 1

Section : Computer Proficiency

Q.1 Which of the following is an example of a web browser?

- Ans 1. MS-Word
 2. Adobe Photoshop
 3. Mozilla Firefox
 4. Notepad

Question ID : 264330173559
Option 1 ID : 264330680715
Option 2 ID : 264330680716
Option 3 ID : 264330680717
Option 4 ID : 264330680718
Status : Answered
Chosen Option : 3

Q.2 In MS Excel 365, how we highlight an entire column?

- Ans 1. By pressing 'Ctrl + F'
 2. By pressing 'Ctrl + H'
 3. By pressing 'Ctrl + Space bar'
 4. By pressing 'Ctrl + Enter'

Question ID : 264330182062
Option 1 ID : 264330714089
Option 2 ID : 264330714087
Option 3 ID : 264330714090
Option 4 ID : 264330714088
Status : Answered
Chosen Option : 3

Q.3 In Microsoft Excel 365, how can you sort data in ascending or descending order?

- Ans
- 1. Data -> Form
 - 2. Data -> Sort
 - 3. Data -> Find
 - 4. Data -> Select

Question ID : 264330182054
Option 1 ID : 264330714056
Option 2 ID : 264330714055
Option 3 ID : 264330714057
Option 4 ID : 264330714058
Status : Answered
Chosen Option : 2

Q.4 In MS Word 365, Ctrl + E key is pressed to perform which of the following tasks?

- Ans
- 1. Justify
 - 2. Left Alignment
 - 3. Center Alignment
 - 4. Right Alignment

Question ID : 264330176719
Option 1 ID : 264330693094
Option 2 ID : 264330693091
Option 3 ID : 264330693093
Option 4 ID : 264330693092
Status : Answered
Chosen Option : 3

Q.5 Which formatting option in MS-Word 365 allows you to slant or tilt the selected text to the right, commonly used for indicating emphasis or to differentiate titles from the main text?

- Ans
- 1. Text Colour
 - 2. Bold
 - 3. Underline
 - 4. Italics

Question ID : 264330173335
Option 1 ID : 264330679819
Option 2 ID : 264330679820
Option 3 ID : 264330679822
Option 4 ID : 264330679821
Status : Answered
Chosen Option : 4

Q.6 What is the primary purpose of 'sorting and searching emails' when using email services?

- Ans
- 1. Organising emails based on various criteria for easy retrieval
 - 2. Sending emails to multiple recipients simultaneously
 - 3. Changing the background colour of email messages
 - 4. Creating animated GIFs to embed in email content

Question ID : 264330178549
Option 1 ID : 264330700225
Option 2 ID : 264330700224
Option 3 ID : 264330700223
Option 4 ID : 264330700226
Status : Answered
Chosen Option : 1

Q.7 Which of the following coloured wavy lines is used to represent spelling errors in an MS Word 365, document?

- Ans
- 1. Black line
 - 2. Blue line
 - 3. Red line
 - 4. Green line

Question ID : 264330179156
Option 1 ID : 264330702630
Option 2 ID : 264330702629
Option 3 ID : 264330702627
Option 4 ID : 264330702628
Status : Answered
Chosen Option : 3

Q.8 What does the 'Font Size' refer to in Microsoft Word 365?

- Ans
- 1. The alignment of the text
 - 2. The size of the text characters
 - 3. The boldness of the text
 - 4. The colour of the text

Question ID : 264330180736
Option 1 ID : 264330708914
Option 2 ID : 264330708913
Option 3 ID : 264330708911
Option 4 ID : 264330708912
Status : Answered
Chosen Option : 2

Q.9 Which of the following options in MS Word 365 means the page is oriented vertically?

- Ans
- 1. PageSet
 - 2. Landscape
 - 3. Portrait
 - 4. Page Setup

Question ID : 264330180436
Option 1 ID : 264330707714
Option 2 ID : 264330707711
Option 3 ID : 264330707712
Option 4 ID : 264330707713
Status : Not Answered
Chosen Option : --

Q.10 एमएस एक्सेल 365 (MS Excel 365) में, एमएस एक्सेल (MS Excel) में, केटेगरी नेम लंबे होने पर या किसी समय अवधि में डेटा की तुलना करते समय, निम्नलिखित में से किस चार्ट का उपयोग किया जाता है?

- Ans 1. पाई चार्ट (Pie chart)
 2. बार चार्ट (Bar chart)
 3. कॉलम चार्ट (Column chart)
 4. लाइन चार्ट (Line chart)

Question ID : 264330180817

Option 1 ID : 264330709234

Option 2 ID : 264330709232

Option 3 ID : 264330709231

Option 4 ID : 264330709233

Status : Answered

Chosen Option : 2



Constable Executive Male and Female in Delhi Police Examination 2023

Roll Number	
Candidate Name	
Venue Name	iON Digital Zone iDZ Vellore
Exam Date	28/11/2023
Exam Time	3:00 PM - 4:30 PM
Subject	Constable Executive Male and Female in Delhi Police Examination 2023

Section : General Knowledge

Q.1 Which of the following Chola Kings raided the Ganga Valley region?

- Ans
- 1. Rajendra I
 - 2. Uttama Chola
 - 3. Arinjaya Chola
 - 4. Gandaraditya

Question ID : 264330119758
Option 1 ID : 264330469308
Option 2 ID : 264330469307
Option 3 ID : 264330469310
Option 4 ID : 264330469309
Status : Not Answered
Chosen Option : --

Q.2 In 1991, India met with an economic crisis due to _____.

- Ans
- 1. low inflation
 - 2. political instability
 - 3. rise in foreign exchange reserves
 - 4. huge debts burden

Question ID : 26433065487
Option 1 ID : 264330256509
Option 2 ID : 264330256511
Option 3 ID : 264330256508
Option 4 ID : 264330256510
Status : Not Answered
Chosen Option : --

Q.3 The Sangeet Natak Akademi gives fellowships to eminent artists. Radha Sridhar received it for Bharatanatyam which is a dance form of which state?

- Ans
- 1. Kerala
 - 2. Andhra Pradesh
 - 3. Karnataka
 - 4. Tamil Nadu

Question ID : 26433071523
Option 1 ID : 264330280519
Option 2 ID : 264330280516
Option 3 ID : 264330280517
Option 4 ID : 264330280518
Status : Answered
Chosen Option : 4

Q.4 'Per Drop More Crop' is the main tag line of which government scheme?

- Ans 1. Pradhan Mantri Fasal Bima Yojana
 2. Pradhan Mantri Krishi Sinchai Yojana
 3. Atal Bhujal Yojana
 4. National Action Plan for Climate Change

Question ID : 264330109412
Option 1 ID : 264330429925
Option 2 ID : 264330429928
Option 3 ID : 264330429926
Option 4 ID : 264330429927
Status : Not Answered
Chosen Option : --

Q.5 'India wins Freedom' is an autobiography written by whom among the following Freedom Fighters?

- Ans 1. Pattabhi Sitaramayya
 2. Abul Kalam Azad
 3. Lokmanya Tilak
 4. Annie Besant

Question ID : 26433064218
Option 1 ID : 264330251466
Option 2 ID : 264330251465
Option 3 ID : 264330251467
Option 4 ID : 264330251464
Status : Answered
Chosen Option : 4

Q.6 To which mineral group do galena, chalcopryrite and molybdenite belong?

- Ans 1. Halides
 2. Sulphides
 3. Phosphides
 4. Oxides

Question ID : 264330131019
Option 1 ID : 264330513190
Option 2 ID : 264330513187
Option 3 ID : 264330513189
Option 4 ID : 264330513188
Status : Not Answered
Chosen Option : --

Q.7 Who presides over the Lok Sabha in absence of the Speaker and the Deputy Speaker?

- Ans 1. Chief Justice of Supreme Court
 2. Person appointed by Prime Minister
 3. Person from amongst the members of the panel nominated by the Speaker
 4. President

Question ID : 264330110605
Option 1 ID : 264330434699
Option 2 ID : 264330434698
Option 3 ID : 264330434700
Option 4 ID : 264330434697
Status : Answered
Chosen Option : 4

Q.8 Pradhan Mantri Garib Kalyan Deposit Scheme (PMGKDS) was launched in which year by the Government of India?

- Ans
- 1. 2009
 - 2. 2014
 - 3. 2016
 - 4. 2020

Question ID : 264330120379
Option 1 ID : 264330471770
Option 2 ID : 264330471768
Option 3 ID : 264330471767
Option 4 ID : 264330471769
Status : Answered
Chosen Option : 3

Q.9 Which of the following High Courts were established in 1866?

- Ans
- 1. Allahabad High Court
 - 2. Kerala High Court
 - 3. Gujarat High Court
 - 4. Bombay High Court

Question ID : 264330177760
Option 1 ID : 264330697148
Option 2 ID : 264330697150
Option 3 ID : 264330697149
Option 4 ID : 264330697147
Status : Answered
Chosen Option : 4

Q.10 Which of the following is an example of indirect tax?

- Ans
- 1. Customs duty
 - 2. Individual income tax
 - 3. Gift tax
 - 4. Corporate income tax

Question ID : 264330112448
Option 1 ID : 264330441879
Option 2 ID : 264330441878
Option 3 ID : 264330441880
Option 4 ID : 264330441877
Status : Answered
Chosen Option : 1

Q.11 Match list I to list II.

- | List I | List II |
|---|-----------|
| a) Regional Rural Banks | i) 1982 |
| b) NABARD | ii) 1975 |
| c) Nationalisation of State Bank of India | iii) 1955 |

- Ans
- 1. a-i, b-ii, c-iii
 - 2. a-iii, b-i, c-ii
 - 3. a-i, b-iii, c-ii
 - 4. a-ii, b-i, c-iii

Question ID : 264330141475
Option 1 ID : 264330554238
Option 2 ID : 264330554236
Option 3 ID : 264330554237
Option 4 ID : 264330554235
Status : Answered
Chosen Option : 1

Q.12 Article 51 of the Indian Constitution says that the state shall endeavour to:

- Ans
- 1. protect and improve the environment and to safeguard forests and wildlife
 - 2. protect monuments, places and objects of artistic or historic interest
 - 3. separate judiciary from the executive
 - 4. promote international peace and security

Question ID : 264330113400
Option 1 ID : 264330445685
Option 2 ID : 264330445686
Option 3 ID : 264330445687
Option 4 ID : 264330445688
Status : Answered
Chosen Option : 2

Q.13 The President of India and the Governor of States enjoy the immunities as mentioned under Article _____.

- Ans
- 1. 360
 - 2. 362
 - 3. 361
 - 4. 359

Question ID : 264330130447
Option 1 ID : 264330510900
Option 2 ID : 264330510902
Option 3 ID : 264330510901
Option 4 ID : 264330510899
Status : Not Answered
Chosen Option : --

Q.14 The Theosophical Society was started by which of the following social reformers?

- Ans
- 1. Raja Ram Mohan Roy
 - 2. Swami Vivekananda
 - 3. Annie Besant
 - 4. Syed Ahmed Khan

Question ID : 264330114880
Option 1 ID : 264330451607
Option 2 ID : 264330451608
Option 3 ID : 264330451606
Option 4 ID : 264330451605
Status : Answered
Chosen Option : 1

Q.15 Which dynasty under the Delhi Sultanate was the first Afghan Pashtun Dynasty in India?

- Ans
- 1. Khilji
 - 2. Mamluk
 - 3. Sayyed
 - 4. Lodhi

Question ID : 264330114826
Option 1 ID : 264330451390
Option 2 ID : 264330451391
Option 3 ID : 264330451389
Option 4 ID : 264330451392
Status : Answered
Chosen Option : 1

Q.16 Under which of the following Acts were the commercial activities to be taken care by the East India Company and the political activities by the British parliament?

- Ans
- 1. Government of India Act of 1935
 - 2. Indian Councils Act of 1861
 - 3. Regulating Act of 1773
 - 4. Pitts India Act, 1784

Question ID : 264330130554
Option 1 ID : 264330511329
Option 2 ID : 264330511330
Option 3 ID : 264330511328
Option 4 ID : 264330511327
Status : Answered
Chosen Option : 3

Q.17 When were the two annual plans carried out?

- Ans
- 1. After the ninth Five-Year Plan
 - 2. After the eight Five-Year Plan
 - 3. After the sixth Five-Year Plan
 - 4. After the seventh Five-Year Plan

Question ID : 264330120885
Option 1 ID : 264330473755
Option 2 ID : 264330473756
Option 3 ID : 264330473758
Option 4 ID : 264330473757
Status : Answered
Chosen Option : 1

Q.18 The Bidar Fort is located in which Indian state?

- Ans
- 1. Andhra Pradesh
 - 2. Rajasthan
 - 3. Karnataka
 - 4. Maharashtra

Question ID : 264330109644
Option 1 ID : 264330430855
Option 2 ID : 264330430853
Option 3 ID : 264330430854
Option 4 ID : 264330430856
Status : Answered
Chosen Option : 4

Q.19 In general, what will happen with rainfall as we move from the equator to the poles?

- Ans
- 1. Rainfall is doubled
 - 2. Rainfall goes on decreasing steadily
 - 3. Rainfall remains constant
 - 4. Rainfall goes on increasing steadily

Question ID : 264330131679
Option 1 ID : 264330515815
Option 2 ID : 264330515816
Option 3 ID : 264330515817
Option 4 ID : 264330515818
Status : Not Answered
Chosen Option : --

Q.20 In which state is New Mangalore port located?

- Ans
- 1. Kerala
 - 2. Karnataka
 - 3. Tamil Nadu
 - 4. Goa

Question ID : 264330173605
Option 1 ID : 264330680901
Option 2 ID : 264330680900
Option 3 ID : 264330680902
Option 4 ID : 264330680899
Status : Answered
Chosen Option : 2

Q.21 The 23rd Commonwealth Games will be hosted by _____ .

- Ans
- 1. England
 - 2. Australia
 - 3. Canada
 - 4. India

Question ID : 264330132541
Option 1 ID : 264330519259
Option 2 ID : 264330519261
Option 3 ID : 264330519262
Option 4 ID : 264330519260
Status : Not Answered
Chosen Option : --

Q.22 Who is the author of the popular novel Pinjar?

- Ans 1. Amrita Pritam
 2. Yashpal
 3. Bhisham Sahni
 4. Dharamvir Bharati

Question ID : 26433064222
Option 1 ID : 264330251483
Option 2 ID : 264330251481
Option 3 ID : 264330251480
Option 4 ID : 264330251482
Status : Not Answered
Chosen Option : --

Q.23 When a carbon compound is burnt resulting in a clean flame, it indicates that it is:

- Ans 1. saturated hydrocarbon compounds
 2. unsaturated hydrocarbon compounds
 3. sulphur containing compounds
 4. nitrogen containing compounds

Question ID : 264330182811
Option 1 ID : 264330717018
Option 2 ID : 264330717015
Option 3 ID : 264330717017
Option 4 ID : 264330717016
Status : Not Answered
Chosen Option : --

Q.24 The Republic Day Parade in India is presided over by the ____.

- Ans 1. Chief of Defence
 2. Vice President of India
 3. President of India
 4. Prime Minister of India

Question ID : 264330109617
Option 1 ID : 264330430748
Option 2 ID : 264330430747
Option 3 ID : 264330430745
Option 4 ID : 264330430746
Status : Answered
Chosen Option : 3

Q.25 During the period 600 BCE - 600 CE, who among the following was the first ruler who inscribed his messages to his subjects and officials on stone surfaces — natural rocks as well as polished pillars?

- Ans 1. Ajatasattu
 2. Ashoka
 3. Bimbisara
 4. Mahapadma Nanda

Question ID : 264330118949
Option 1 ID : 264330466452
Option 2 ID : 264330466453
Option 3 ID : 264330466451
Option 4 ID : 264330466454
Status : Not Answered
Chosen Option : --

Q.26 Which of the following Amendment Acts laid down fundamental duties for Indian citizens?

- Ans
- 1. The 44th Amendment Act
 - 2. The 43rd Amendment Act
 - 3. The 41st Amendment Act
 - 4. The 42nd Amendment Act

Question ID : 264330109837
Option 1 ID : 264330431628
Option 2 ID : 264330431627
Option 3 ID : 264330431625
Option 4 ID : 264330431626
Status : Answered
Chosen Option : 1

Q.27 Chanakya had received his education at _____ .

- Ans
- 1. Vikramashila
 - 2. Nalanda
 - 3. Ujjain
 - 4. Taxila

Question ID : 264330118955
Option 1 ID : 264330466476
Option 2 ID : 264330466475
Option 3 ID : 264330466478
Option 4 ID : 264330466477
Status : Not Answered
Chosen Option : --

Q.28 Champaran Satyagraha was led by whom among the following freedom fighters of British India?

- Ans
- 1. Lal Bahadur Shastri
 - 2. Rajendra Prasad
 - 3. Mahatma Gandhi
 - 4. Subhash Chandra Bose

Question ID : 264330182736
Option 1 ID : 264330716715
Option 2 ID : 264330716716
Option 3 ID : 264330716717
Option 4 ID : 264330716718
Status : Answered
Chosen Option : 1

Q.29 Which of the following dances was influenced by the Ras Leela of North India?

- Ans
- 1. Bharatnatyam
 - 2. Kuchipudi
 - 3. Odissi
 - 4. Kathak

Question ID : 264330110411
Option 1 ID : 264330433924
Option 2 ID : 264330433922
Option 3 ID : 264330433921
Option 4 ID : 264330433923
Status : Answered
Chosen Option : 3

Q.30 Purnamasi Jani is a tribal singer and social activist who has sung thousands of songs promoting social causes in _____.

- Ans
- 1. Kumauni
 - 2. Odia
 - 3. Marwari
 - 4. Bodo

Question ID : 264330110244
Option 1 ID : 264330433256
Option 2 ID : 264330433255
Option 3 ID : 264330433254
Option 4 ID : 264330433253
Status : Not Answered
Chosen Option : --

Q.31 Which form of art was showcased in the show "Vande Bharatam" organised by the Ministry of Culture on the occasion of Republic Day, 2023?

- Ans
- 1. Painting
 - 2. Dance
 - 3. Music
 - 4. Literature

Question ID : 264330132409
Option 1 ID : 264330518733
Option 2 ID : 264330518734
Option 3 ID : 264330518731
Option 4 ID : 264330518732
Status : Answered
Chosen Option : 3

Q.32 In karate, how many points are awarded for an 'Ippon'?

- Ans
- 1. 1
 - 2. 4
 - 3. 2
 - 4. 3

Question ID : 264330113778
Option 1 ID : 264330447199
Option 2 ID : 264330447200
Option 3 ID : 264330447198
Option 4 ID : 264330447197
Status : Not Answered
Chosen Option : --

Q.33 For the propagation of which faith was the Sattriya dance form introduced in Assam by Sankaradeva?

- Ans
- 1. Buddhism
 - 2. Vaishnavism
 - 3. Jainism
 - 4. Shaivism

Question ID : 264330111787
Option 1 ID : 264330439234
Option 2 ID : 264330439236
Option 3 ID : 264330439233
Option 4 ID : 264330439235
Status : Not Answered
Chosen Option : --

Q.34 Under Article 21 A of the Constitution of India, what is the age for children to be provided with free and compulsory education?

- Ans**
- 1. Eight to fourteen years
 - 2. Eight to twelve years
 - 3. Six to fourteen years
 - 4. Ten to fourteen years

Question ID : 264330133063
Option 1 ID : 264330521306
Option 2 ID : 264330521305
Option 3 ID : 264330521303
Option 4 ID : 264330521304
Status : Answered
Chosen Option : 3

Q.35 Identify the correct combination of musical instrument and the artist associated with that instrument.

- Ans**
- 1. Ali Akbar Khan – Tabla
 - 2. Zakir Hussain – Sarod
 - 3. Bismillah Khan – Flute
 - 4. Shiv Kumar Sharma – Santoor

Question ID : 264330111195
Option 1 ID : 264330436868
Option 2 ID : 264330436865
Option 3 ID : 264330436866
Option 4 ID : 264330436867
Status : Not Answered
Chosen Option : --

Q.36 Read the given statements and select the most appropriate option.

- i) A white blood cell (WBC) in human blood can change its shape.
- ii) The shape of amoeba appears irregular.

- Ans**
- 1. Only statement two is correct.
 - 2. Both statements are correct.
 - 3. Both statements are incorrect.
 - 4. Only statement one is correct.

Question ID : 264330113332
Option 1 ID : 264330445416
Option 2 ID : 264330445413
Option 3 ID : 264330445414
Option 4 ID : 264330445415
Status : Not Answered
Chosen Option : --

Q.37 Which of the following rivers forms the 'Dhuadhar Falls' in Madhya Pradesh?

- Ans 1. Narmada
 2. Tapi
 3. Godavari
 4. Mahanadi

Question ID : 264330176008
Option 1 ID : 264330690328
Option 2 ID : 264330690330
Option 3 ID : 264330690327
Option 4 ID : 264330690329
Status : Answered
Chosen Option : 1

Q.38 Which of the following associations was established by Dr BR Ambedkar in 1930?

- Ans 1. All India Harijan Sewak Sangh
 2. Satyashodhak Samaj
 3. Depressed Classes Association
 4. Depressed Classes' Education Society

Question ID : 264330114107
Option 1 ID : 264330448514
Option 2 ID : 264330448513
Option 3 ID : 264330448515
Option 4 ID : 264330448516
Status : Answered
Chosen Option : 2

Q.39 Which of the following is a state where more people are engaged in work than are really needed?

- Ans 1. Frictional Unemployment
 2. Open Unemployment
 3. Seasonal Unemployment
 4. Disguised Unemployment

Question ID : 264330183052
Option 1 ID : 264330717941
Option 2 ID : 264330717943
Option 3 ID : 264330717942
Option 4 ID : 264330717940
Status : Not Answered
Chosen Option : --

Q.40 Match column A with column B.

Column-A

- i. Producer
- ii. Primary consumer
- iii. Tertiary consumer
- iv. Decomposer

Column-B

- a. Carnivorous predators
- b. Green plants
- c. Bacteria
- d. Herbivorous animals

- Ans
- 1. i-b, ii-a, iii-d, iv-c
 - 2. i-b, ii-d, iii-a, iv-c
 - 3. i-a, ii-b, iii-c, iv-d
 - 4. i-b, ii-a, iii-c, iv-d

Question ID : 264330120956

Option 1 ID : 264330474041

Option 2 ID : 264330474040

Option 3 ID : 264330474039

Option 4 ID : 264330474042

Status : Not Answered

Chosen Option : --

Q.41 Which of the following constitutes a food chain starting from producer to top carnivores?

- Ans
- 1. Insects → Frogs → Snakes → Vultures
 - 2. Small Plants → Insects → Fish → Birds → Tigers
 - 3. Soil → Grass → Deer → Tiger
 - 4. Grass → Insects → Snakes → Birds → Tigers

Question ID : 264330182361

Option 1 ID : 264330715268

Option 2 ID : 264330715267

Option 3 ID : 264330715270

Option 4 ID : 264330715269

Status : Not Answered

Chosen Option : --

Q.42 Which of the following temples is located at the centre point of the world's magnetic equator?

- Ans
- 1. Kailasanathar Temple
 - 2. Meenakshi Temple
 - 3. Chidambaram Temple
 - 4. Srirangam Temple

Question ID : 264330106252

Option 1 ID : 264330417312

Option 2 ID : 264330417309

Option 3 ID : 264330417311

Option 4 ID : 264330417310

Status : Not Answered

Chosen Option : --

Q.43 What is the approximate circumference of a cricket ball?

- Ans 1. Around 9 inches
 2. Around 6 inches
 3. Around 5 inches
 4. Around 12 inches

Question ID : 264330113759
Option 1 ID : 264330447121
Option 2 ID : 264330447124
Option 3 ID : 264330447123
Option 4 ID : 264330447122
Status : Answered
Chosen Option : 1

Q.44 Which of the following industrial plants is supplied water from Bhadravati River?

- Ans 1. Bokaro Steel Plant
 2. Durgapur Steel Plant
 3. Rourkela Steel Plant
 4. Visvesvaraya Iron and Steel Plant

Question ID : 264330178712
Option 1 ID : 264330700878
Option 2 ID : 264330700875
Option 3 ID : 264330700877
Option 4 ID : 264330700876
Status : Not Answered
Chosen Option : --

Q.45 R.L.V Ramakrishnan won the Akademi Award for Mohiniyattam in 2021. It is the classical dance form of which of the following States?

- Ans 1. Andhra Pradesh
 2. Odisha
 3. Kerala
 4. Assam

Question ID : 26433086665
Option 1 ID : 264330340304
Option 2 ID : 264330340302
Option 3 ID : 264330340303
Option 4 ID : 264330340301
Status : Not Answered
Chosen Option : --

Q.46 Which of the following is the first grand slam of the year?

- Ans 1. French Open
 2. Australian Open
 3. Wimbledon
 4. US Open

Question ID : 264330130649
Option 1 ID : 264330511709
Option 2 ID : 264330511710
Option 3 ID : 264330511707
Option 4 ID : 264330511708
Status : Not Answered
Chosen Option : --

Q.47 In which year was India's first post-Independence census conducted?

- Ans 1. 1954
 2. 1960
 3. 1958
 4. 1951

Question ID : 264330182967
Option 1 ID : 264330717600
Option 2 ID : 264330717602
Option 3 ID : 264330717601
Option 4 ID : 264330717603
Status : Answered
Chosen Option : 4

Q.48 The _____ is empowered to direct that an act of parliament does NOT apply to a scheduled area in the state.

- Ans 1. Supreme Court
 2. Governor
 3. Chief Minister
 4. High Court

Question ID : 264330120168
Option 1 ID : 264330470928
Option 2 ID : 264330470930
Option 3 ID : 264330470929
Option 4 ID : 264330470927
Status : Not Answered
Chosen Option : --

Q.49 Under the Liberalisation Measure, the Monopolies and Restrictive Trade Practices (MRTP) Act 1969 was repealed by which of the following Acts?

- Ans 1. Industries Development and Regulation Act 1951
 2. Competition Act 2002
 3. Foreign Exchange Regulation Act 1973
 4. Foreign Exchange Management Act 1999

Question ID : 264330111600
Option 1 ID : 264330438488
Option 2 ID : 264330438485
Option 3 ID : 264330438486
Option 4 ID : 264330438487
Status : Not Answered
Chosen Option : --

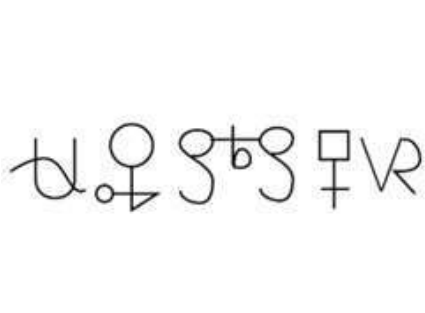
Q.50 According to a new definition of MSMEs 2020, medium enterprise turnover should NOT exceed how much amount?

- Ans** 1. ₹250 crore
 2. ₹150 crore
 3. ₹200 crore
 4. ₹100 crore

Question ID : 264330109393
Option 1 ID : 264330429852
Option 2 ID : 264330429850
Option 3 ID : 264330429851
Option 4 ID : 264330429849
Status : Not Answered
Chosen Option : --

Section : Reasoning

Q.1 Select the correct mirror image of the given pattern when the mirror is placed at 'AB' as shown.



- Ans** 1. A mirror image of the pattern where the symbols are reversed horizontally.
 2. A mirror image of the pattern where the symbols are reversed horizontally and vertically.
 3. A mirror image of the pattern where the symbols are reversed horizontally.
 4. A mirror image of the pattern where the symbols are reversed horizontally and vertically.

Question ID : 264330121805
Option 1 ID : 264330477394
Option 2 ID : 264330477391
Option 3 ID : 264330477392
Option 4 ID : 264330477393
Status : Answered
Chosen Option : 3

Q.2 Read the given statements and conclusions carefully. Assuming that the information given in the statements is true, even if it appears to be at variance with commonly known facts, decide which of the given conclusions logically follow(s) from the statements.

Statements:

All mangoes are grapes.

All grapes are guavas.

Conclusions:

I. Some guavas are mangoes.

II. All mangoes are guavas.

- Ans
- 1. Neither conclusion I nor II follows
 - 2. Only conclusion I follows
 - 3. Both conclusions I and II follow
 - 4. Only conclusion II follows

Question ID : 26433069511

Option 1 ID : 264330272559

Option 2 ID : 264330272556

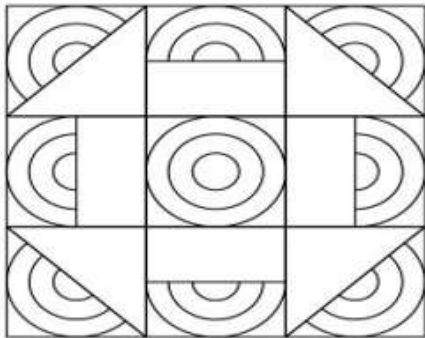
Option 3 ID : 264330272558

Option 4 ID : 264330272557

Status : Answered

Chosen Option : 3

Q.3 How many semicircles are there in the given figure?



- Ans
- 1. 27
 - 2. 24
 - 3. 30
 - 4. 33

Question ID : 26433080671

Option 1 ID : 264330316620

Option 2 ID : 264330316619

Option 3 ID : 264330316617

Option 4 ID : 264330316618

Status : Answered

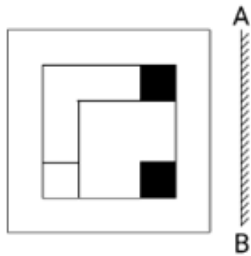
Chosen Option : 1

Q.4 Select the correct combination of mathematical signs to sequentially replace the * signs and to balance the given equation.
 $17 * 17 * 50 * 28 * 7 * 243$

- Ans
- 1. -, +, x, ÷, =
 - 2. x, -, +, ÷, =
 - 3. +, +, -, x, =
 - 4. x, +, -, ÷, =

Question ID : 26433076553
 Option 1 ID : 264330300277
 Option 2 ID : 264330300279
 Option 3 ID : 264330300278
 Option 4 ID : 264330300276
 Status : Answered
 Chosen Option : 2

Q.5 Select the correct mirror image of the given figure when the mirror is placed at 'AB' as shown.



Ans

- 1.
- 2.
- 3.
- 4.

Question ID : 264330113093
 Option 1 ID : 264330444458
 Option 2 ID : 264330444460
 Option 3 ID : 264330444457
 Option 4 ID : 264330444459
 Status : Answered
 Chosen Option : 2

Q.6 Select the option that is related to the fifth letter-cluster in the same way as the second letter-cluster is related to the first letter-cluster and the fourth letter-cluster is related to the third letter-cluster.

LOVE : BSLI :: WORK : HOLT :: SORT : ?

- Ans 1. QQLP
 2. QQLR
 3. ROLQ
 4. QOMP

Question ID : 26433076459
Option 1 ID : 264330299900
Option 2 ID : 264330299903
Option 3 ID : 264330299902
Option 4 ID : 264330299901
Status : Not Answered
Chosen Option : --

Q.7 Select the set in which the numbers are related in the same way as are the numbers of the following sets.

(NOTE : Operations should be performed on the whole numbers, without breaking down the numbers into its constituent digits. E.g. 13 – Operations on 13 such as adding /deleting /multiplying etc. to 13 can be performed. Breaking down 13 into 1 and 3 and then performing mathematical operations on 1 and 3 is not allowed.)
(63, 9, 27)
(105, 15, 45)

- Ans 1. (147, 21, 65)
 2. (149, 21, 63)
 3. (147, 21, 63)
 4. (149, 21, 65)

Question ID : 264330175036
Option 1 ID : 264330686521
Option 2 ID : 264330686519
Option 3 ID : 264330686522
Option 4 ID : 264330686520
Status : Answered
Chosen Option : 3

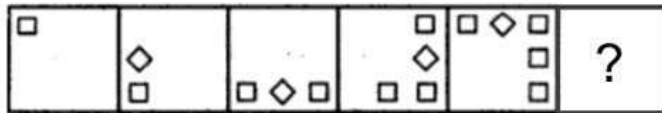
Q.8 Select the correct combination of mathematical signs that can sequentially replace the * signs and balance the given expression.
 $53 * 19 * 8 * 32 * 4 * 197$

- Ans 1. +, +, x, -, =
 2. +, x, -, +, =
 3. +, -, x, +, =
 4. x, +, -, +, =

Question ID : 26433074783
Option 1 ID : 264330293220
Option 2 ID : 264330293222
Option 3 ID : 264330293223
Option 4 ID : 264330293221
Status : Answered
Chosen Option : 2

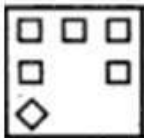
Q.9 Select the figure from among the given options that can replace the question mark

(?) in the following series.

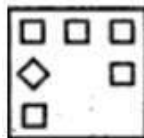


Ans

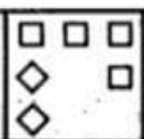
1.



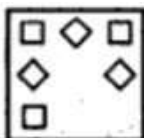
2.



3.



4.



Question ID : 26433080524

Option 1 ID : 264330316030

Option 2 ID : 264330316031

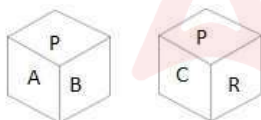
Option 3 ID : 264330316032

Option 4 ID : 264330316029

Status : Answered

Chosen Option : 2

Q.10 Six letters A, B, C, P, Q and R are written on different faces of a dice. Two positions of this dice are shown in the figure. Find the letter on the face opposite to B.



Ans 1. Q

2. R

3. A

4. C

Question ID : 264330109207

Option 1 ID : 264330429107

Option 2 ID : 264330429108

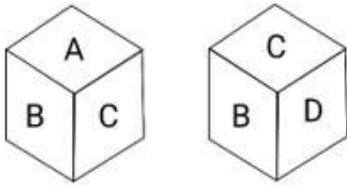
Option 3 ID : 264330429105

Option 4 ID : 264330429106

Status : Answered

Chosen Option : 2

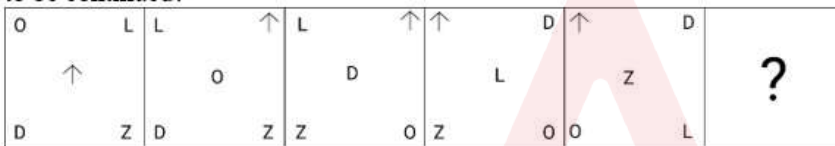
Q.11 Six letters, A, B, C, D, E and F, are written on the different faces of a dice. Two positions of this dice are shown in the given figure. Find the letter on the face opposite to D.



- Ans
- 1. E
 - 2. B
 - 3. F
 - 4. A

Question ID : 264330106167
 Option 1 ID : 264330416970
 Option 2 ID : 264330416972
 Option 3 ID : 264330416971
 Option 4 ID : 264330416969
 Status : Answered
 Chosen Option : 4

Q.12 Which figure should replace the question mark (?) if the following series were to be continued?

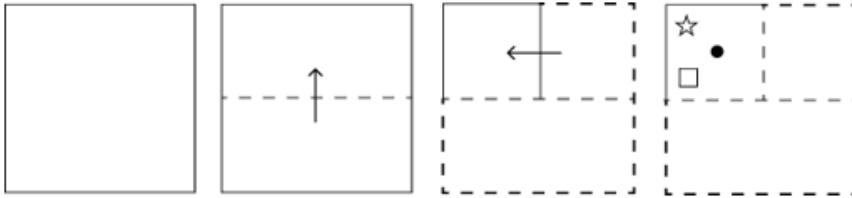


Ans

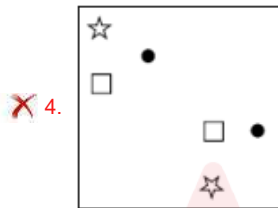
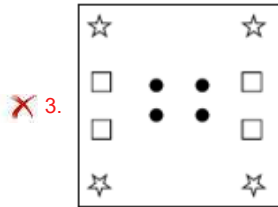
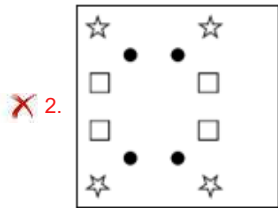
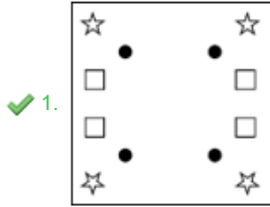
- 1.
- 2.
- 3.
- 4.

Question ID : 264330103850
 Option 1 ID : 264330407704
 Option 2 ID : 264330407701
 Option 3 ID : 264330407702
 Option 4 ID : 264330407703
 Status : Answered
 Chosen Option : 1

Q.13 A square sheet of paper is folded along the dotted line successively along the directions shown and is then punched in the last. How would the paper look when unfolded?



Ans



Question ID : 264330172427

Option 1 ID : 264330676260

Option 2 ID : 264330676259

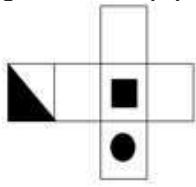
Option 3 ID : 264330676261

Option 4 ID : 264330676262

Status : Answered

Chosen Option : 1

Q.14 Choose the dice from the given options that is similar to the dice formed from the given sheet of paper (X).



(X)

Ans



Question ID : 264330111296

Option 1 ID : 264330437271

Option 2 ID : 264330437270

Option 3 ID : 264330437269

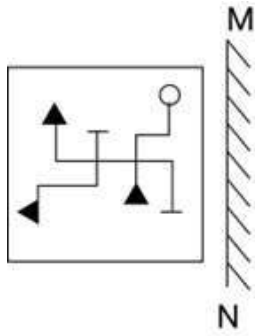
Option 4 ID : 264330437272

Status : Answered

Chosen Option : 3

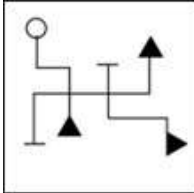
Adda247

Q.15 Select the correct mirror image of the given combination when the mirror is placed at 'MN' as shown below.

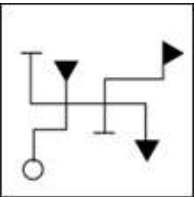


Ans

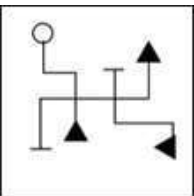
✓ 1.



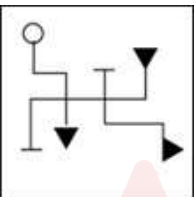
✗ 2.



✗ 3.



✗ 4.



Question ID : 264330130767

Option 1 ID : 264330512180

Option 2 ID : 264330512179

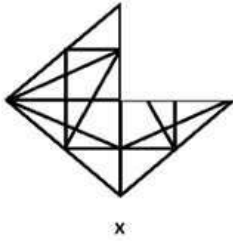
Option 3 ID : 264330512182

Option 4 ID : 264330512181

Status : Answered

Chosen Option : 1

Q.16 Select a figure from amongst the four given options which, when placed in the blank space of figure (X), would complete the pattern.



Ans

- 1.
- 2.
- 3.
- 4.

Question ID : 264330102214
Option 1 ID : 264330401323
Option 2 ID : 264330401322
Option 3 ID : 264330401324
Option 4 ID : 264330401321
Status : Answered
Chosen Option : 3

Q.17 Which of the following terms will replace the question mark (?) in the given series?
GSJV, IQLT, KONR, ?, OKRN

- 1. NMOP
- 2. MNPO
- 3. MMPP
- 4. LMPO

Question ID : 264330102172
Option 1 ID : 264330401155
Option 2 ID : 264330401154
Option 3 ID : 264330401156
Option 4 ID : 264330401153
Status : Answered
Chosen Option : 3

Q.18 In a certain code language, 'TIDE' is written as 'EDJS' and 'MARS' is written as 'BLSR'.
How will 'HOPE' be written in that language?

- Ans
- 1. EPFG
 - 2. FIQP
 - 3. PEHO
 - 4. FGPO

Question ID : 26433087178

Option 1 ID : 264330342350

Option 2 ID : 264330342352

Option 3 ID : 264330342349

Option 4 ID : 264330342351

Status : Not Answered

Chosen Option : --

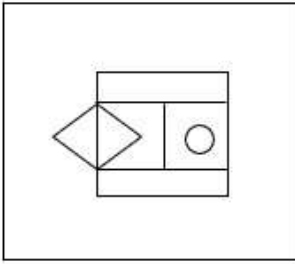


Q.19 Select the option figure in which the given figure is embedded. (Rotation is not allowed)

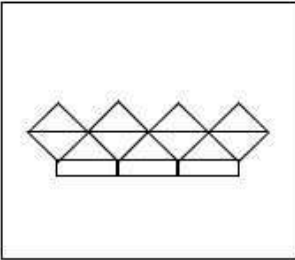


Ans

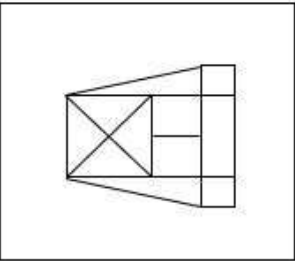
✗ 1.



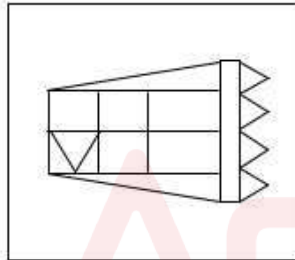
✗ 2.



✗ 3.



✓ 4.



Question ID : 264330101316

Option 1 ID : 264330397811

Option 2 ID : 264330397812


Option 3 ID : 264330397809

Option 4 ID : 264330397810

Status : Answered

Chosen Option : 4

Q.20 Select the figure that will come next in the following figure series.



Ans

- 1.
- 2.
- 3.
- 4.

Question ID : 264330129649

Option 1 ID : 264330507964

Option 2 ID : 264330507962

Option 3 ID : 264330507963

Option 4 ID : 264330507965

Status : Answered

Chosen Option : 4

Q.21 Seven children - T, U, V, W, X, Y and Z - are sitting in a straight row, facing north. U sits second to left of Z. Y sits third to the left of T. Only one child sits to the right of X. Only two children sit to the left of W. Who among the following children sits at the extreme left end of the row?

- Ans
- 1. T
 - 2. Y
 - 3. U
 - 4. V

Question ID : 26433087019

Option 1 ID : 264330341720

Option 2 ID : 264330341719

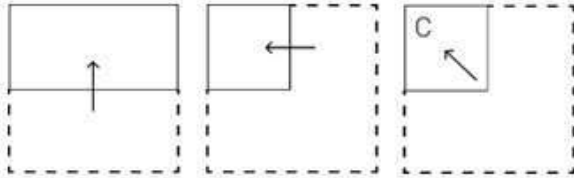
Option 3 ID : 264330341717

Option 4 ID : 264330341718

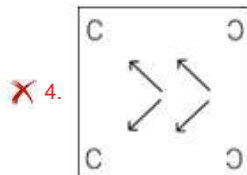
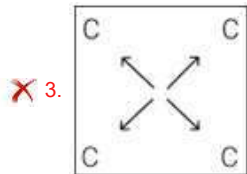
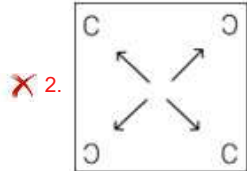
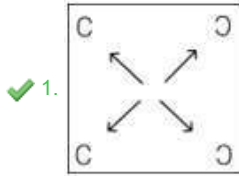
Status : Answered

Chosen Option : 1

Q.22 A paper is folded and cut as shown below. How will it appear when unfolded?



Ans



Question ID : 264330114707
 Option 1 ID : 264330450916
 Option 2 ID : 264330450915
 Option 3 ID : 264330450914
 Option 4 ID : 264330450913

Status : Answered
 Chosen Option : 1

Q.23 Which of the following options will replace the question mark (?) in the given series?
 150, 230, 322, 402, ?, 574

Ans ✗ 1. 488

✓ 2. 494

✗ 3. 477

✗ 4. 459

Question ID : 264330109428
 Option 1 ID : 264330429992
 Option 2 ID : 264330429989
 Option 3 ID : 264330429990
 Option 4 ID : 264330429991

Status : Answered
 Chosen Option : 2

Q.24 Select the option that is related to the third term in the same way as the second term is related to the first term and the sixth term is related to the fifth term.
24 : 566 :: 12 : ? :: 8 : 54

- Ans 1. 134
 2. 124
 3. 120
 4. 154

Question ID : 264330101054
Option 1 ID : 264330396762
Option 2 ID : 264330396763
Option 3 ID : 264330396764
Option 4 ID : 264330396761
Status : Answered
Chosen Option : 4

Q.25 Select the correct mirror image of the given figure when the mirror is placed at PQ as shown below.

A C P 2 d Z k



- Ans 1. A C B 5 9 Z K
 2. K Z b 5 9 C A
 3. K Z b 5 9 C A
 4. K Z d Z K

Question ID : 26433080782
Option 1 ID : 264330317061
Option 2 ID : 264330317064
Option 3 ID : 264330317063
Option 4 ID : 264330317062
Status : Answered
Chosen Option : 3

Section : Numerical Ability

Q.1 Find the average of all the even numbers from 22 to 30 (inclusive both).

- Ans 1. 26.0
 2. 25.5
 3. 24.5
 4. 25.0

Question ID : 264330131440
Option 1 ID : 264330514866
Option 2 ID : 264330514865
Option 3 ID : 264330514863
Option 4 ID : 264330514864
Status : Answered
Chosen Option : 1

Q.2 200 men have provisions for 30 days. If 50 of these men leave, for how many days will the same provisions last for the remaining men?

- Ans
- 1. 28 days
 - 2. 32 days
 - 3. 40 days
 - 4. 24 days

Question ID : 264330182572
Option 1 ID : 264330716080
Option 2 ID : 264330716081
Option 3 ID : 264330716082
Option 4 ID : 264330716079
Status : Answered
Chosen Option : 4

Q.3 The ratio of the number of boys to that of the girls in a school is 7 : 9. If there are 1183 boys in the school, what is the total number of boys and girls in that school?

- Ans
- 1. 2736
 - 2. 2688
 - 3. 2704
 - 4. 2720

Question ID : 264330131165
Option 1 ID : 264330513774
Option 2 ID : 264330513772
Option 3 ID : 264330513771
Option 4 ID : 264330513773
Status : Answered
Chosen Option : 3

Q.4

If $\frac{52416}{168} = 312$, then the value of $\frac{52.416}{0.0168}$ is:

- Ans
- 1. 3120
 - 2. 3.12
 - 3. 31.2
 - 4. 312

Question ID : 264330111439
Option 1 ID : 264330437844
Option 2 ID : 264330437842
Option 3 ID : 264330437841
Option 4 ID : 264330437843
Status : Not Answered
Chosen Option : --

Q.5 If $\frac{b}{a} = 0.75$, then $\frac{2a - b}{2a + b} + \frac{8}{9}$ is equal to:

- Ans
- ✓ 1. $\frac{133}{99}$
 - ✗ 2. $\frac{13}{9}$
 - ✗ 3. $\frac{19}{111}$
 - ✗ 4. $\frac{17}{99}$

Question ID : 264330104340

Option 1 ID : 264330409663

Option 2 ID : 264330409661

Option 3 ID : 264330409664

Option 4 ID : 264330409662

Status : Not Answered

Chosen Option : --

Q.6 A woman gains 20% by selling an article for a certain price. If she sells it at double the price, then the profit made is:

- Ans
- ✗ 1. 110%
 - ✓ 2. 140%
 - ✗ 3. 120%
 - ✗ 4. 130%

Question ID : 264330104499

Option 1 ID : 264330410298

Option 2 ID : 264330410299

Option 3 ID : 264330410297

Option 4 ID : 264330410300

Status : Answered

Chosen Option : 2

Q.7 The monthly income of Lucas is ₹42,500. If his income is increased by 18%, then find his new monthly income (in ₹).

- Ans
- ✗ 1. 47,500
 - ✗ 2. 43,000
 - ✗ 3. 48,120
 - ✓ 4. 50,150

Question ID : 264330102323

Option 1 ID : 264330401760

Option 2 ID : 264330401759

Option 3 ID : 264330401757

Option 4 ID : 264330401758

Status : Answered

Chosen Option : 4

Q.8 If the volume and surface area of a sphere are numerically the same, then its radius is:

- Ans 1. 3 units
 2. 4 units
 3. 1 unit
 4. 2 units

Question ID : 264330119364
Option 1 ID : 264330467745
Option 2 ID : 264330467746
Option 3 ID : 264330467743
Option 4 ID : 264330467744
Status : Not Answered
Chosen Option : --

Q.9 If 125 identical small solid spheres are made out of a big solid sphere of radius 5 cm, what is the surface area (in cm^2) of each small sphere?

- Ans 1. 8π
 2. 25π
 3. 12π
 4. 4π

Question ID : 264330112431
Option 1 ID : 264330441810
Option 2 ID : 264330441812
Option 3 ID : 264330441811
Option 4 ID : 264330441809
Status : Not Answered
Chosen Option : --

Q.10 A man completes his journey in 6 h. He covers half the distance at the speed of 30 km/h and the rest at 50 km/h. The length of the journey (in km) is:

- Ans 1. 125
 2. 225
 3. 252
 4. 112.5

Question ID : 264330183833
Option 1 ID : 264330721008
Option 2 ID : 264330721009
Option 3 ID : 264330721010
Option 4 ID : 264330721011
Status : Answered
Chosen Option : 2

Q.11 For a sum of Rs.7,500, the rate of interest is 7.5% per annum simple interest. Find the interest earned in 4 years 9 months.

- Ans
- 1. Rs.2,617.875
 - 2. Rs.2,871
 - 3. Rs.2,671.875
 - 4. Rs.2761.875

Question ID : 264330122076
Option 1 ID : 264330478441
Option 2 ID : 264330478440
Option 3 ID : 264330478442
Option 4 ID : 264330478439
Status : Answered
Chosen Option : 3

Q.12 An almirah is sold at ₹6,500 after allowing a discount of 20%. Find its marked price (in ₹).

- Ans
- 1. 8,125
 - 2. 8,235
 - 3. 8,000
 - 4. 7,546

Question ID : 264330126575
Option 1 ID : 264330495975
Option 2 ID : 264330495972
Option 3 ID : 264330495974
Option 4 ID : 264330495973
Status : Answered
Chosen Option : 1

Q.13 The compound interest on ₹50,000 at 8% per annum is ₹8,320. Find the period.

- Ans
- 1. 2 years
 - 2. 5 years
 - 3. 3 years
 - 4. 4 years

Question ID : 264330106006
Option 1 ID : 264330416325
Option 2 ID : 264330416328
Option 3 ID : 264330416326
Option 4 ID : 264330416327
Status : Answered
Chosen Option : 1

Q.14 In an election between two candidates, 10% of voters didn't participate in voting, 20% votes were declared invalid and the winner got 70% of the total valid votes and won by 6480 votes. Find the total number of votes in the voting list.

- Ans 1. 22,500
 2. 28,400
 3. 26,700
 4. 25,600

Question ID : 264330129401

Option 1 ID : 264330506972

Option 2 ID : 264330506970

Option 3 ID : 264330506973

Option 4 ID : 264330506971

Status : Not Attempted and
Marked For Review

Chosen Option : --

Q.15 The simplified value of $2.5 \times (4 - (2^4 - 3^3)) \div \left(\frac{11}{4}\right) \div 8 \times \left(\frac{4}{3}\right)$ is _____.

- Ans 1. $\frac{8}{3}$
 2. $\frac{10}{3}$
 3. $-\frac{2}{3}$
 4. $\frac{4}{3}$

Question ID : 264330112060

Option 1 ID : 264330440326

Option 2 ID : 264330440325

Option 3 ID : 264330440327

Option 4 ID : 264330440328

Status : Not Answered

Chosen Option : --

Section : Computer Proficiency

Q.1 Which of the following keyboard shortcut keys is used to cut the selected text in MS-Word 365?

- Ans 1. Ctrl + c
 2. Ctrl + x
 3. Ctrl + p
 4. Ctrl + v

Question ID : 264330178289

Option 1 ID : 264330699211

Option 2 ID : 264330699213

Option 3 ID : 264330699214

Option 4 ID : 264330699212

Status : Not Answered

Chosen Option : --

Q.2 What does the Uniform Resource Locator (URL) specify?

- Ans
- 1. HTML
 - 2. Unique address assigned to each web resource
 - 3. ISP
 - 4. Internet protocol

Question ID : 264330182104
Option 1 ID : 264330714258
Option 2 ID : 264330714256
Option 3 ID : 264330714257
Option 4 ID : 264330714255
Status : Not Answered
Chosen Option : --

Q.3 In MS Word 365 Which of the following best describes the use of justify text?

- Ans
- 1. To align evenly along left margins
 - 2. To align evenly along right margins
 - 3. To center the text
 - 4. To align evenly along left and right margins

Question ID : 264330176720
Option 1 ID : 264330693097
Option 2 ID : 264330693098
Option 3 ID : 264330693095
Option 4 ID : 264330693096
Status : Not Answered
Chosen Option : --

Q.4 In MS Excel 365, which of the following is the correct option to open an existing spread sheet in MS-Excel?

- Ans
- 1. Click on File tab<<Click on Open
 - 2. Click on File tab<<Click on New
 - 3. Click on Home tab<<Click on New
 - 4. Click on Home tab<<Click on Open

Question ID : 264330176681
Option 1 ID : 264330692940
Option 2 ID : 264330692939
Option 3 ID : 264330692941
Option 4 ID : 264330692942
Status : Not Answered
Chosen Option : --

Q.5 In MS Excel 365, which Microsoft Excel view allows you to see how the printed worksheet will look before actually printing it?

- Ans
- 1. Full Screen view
 - 2. Page Layout view
 - 3. Print Preview
 - 4. Normal view

Question ID : 264330180683
Option 1 ID : 264330708702
Option 2 ID : 264330708699
Option 3 ID : 264330708701
Option 4 ID : 264330708700
Status : Not Answered
Chosen Option : --

Q.6 Which of the following options allows you to choose whether to keep or discard the formatting of pasted text in MS Word 365?

- Ans**
- 1. Font Selection
 - 2. Cut and Paste
 - 3. Paste Special
 - 4. Format Painter

Question ID : 264330180857
Option 1 ID : 264330709394
Option 2 ID : 264330709393
Option 3 ID : 264330709391
Option 4 ID : 264330709392
Status : Not Answered
Chosen Option : --

Q.7 In MS-Word 365, which action allows you to duplicate selected text and place a copy of it on the clipboard?

- Ans**
- 1. Select All
 - 2. Cut
 - 3. Paste
 - 4. Copy

Question ID : 264330173356
Option 1 ID : 264330679906
Option 2 ID : 264330679903
Option 3 ID : 264330679905
Option 4 ID : 264330679904
Status : Not Answered
Chosen Option : --

Q.8 Which of the following windows is used when we want to write an email in Gmail?

- Ans**
- 1. Compose
 - 2. Send
 - 3. Spam
 - 4. Draft

Question ID : 264330178239
Option 1 ID : 264330699012
Option 2 ID : 264330699014
Option 3 ID : 264330699013
Option 4 ID : 264330699011
Status : Not Answered
Chosen Option : --

Q.9 Which of the following is the default font when a new blank document is created in MS Word 365?

- Ans**
- 1. Calibri
 - 2. Times New Roman
 - 3. Arial
 - 4. Cambria

Question ID : 264330176725
Option 1 ID : 264330693115
Option 2 ID : 264330693116
Option 3 ID : 264330693117
Option 4 ID : 264330693118
Status : Not Answered
Chosen Option : --

Q.10 In MS Excel 365 which of the following is an example of absolute reference pointing to cell A1 in MS Excel?

Ans ✓ 1. \$A\$1

✗ 2. A1

✗ 3. @A1

✗ 4. 1A

Question ID : 264330180398

Option 1 ID : 264330707561

Option 2 ID : 264330707559

Option 3 ID : 264330707562

Option 4 ID : 264330707560

Status : Not Answered

Chosen Option : --



Constable Executive Male and Female in Delhi Police Examination 2023

Roll Number	
Candidate Name	
Venue Name	R K Digital Computer Centre 2
Exam Date	29/11/2023
Exam Time	9:00 AM - 10:30 AM
Subject	Constable Executive Male and Female in Delhi Police Examination 2023

Section : **General Knowledge**

Q.1 Who was the President of India between the years 1987 and 1992?

- Ans 1. Giani Zail Singh
 2. R Venkataraman
 3. Fakhruddin Ali Ahmed
 4. Shankar Dayal Sharma

Question ID : 264330110815
Option 1 ID : 264330435540
Option 2 ID : 264330435538
Option 3 ID : 264330435539
Option 4 ID : 264330435537
Status : **Marked For Review**
Chosen Option : 4

Q.2 Buddhist texts called Dipavamsa and Mahavamsa, which are the sources of information to Mauryan times, belong to which of the following countries?

- Ans 1. India
 2. China
 3. Myanmar
 4. Sri Lanka

Question ID : 264330130539
Option 1 ID : 264330511270
Option 2 ID : 264330511267
Option 3 ID : 264330511268
Option 4 ID : 264330511269
Status : **Answered**
Chosen Option : 1

Q.3 The Nalanda University was built in _____.

- Ans 1. Magadha
 2. Kuru
 3. Matsya
 4. Vatsa

Question ID : 26433086598
Option 1 ID : 264330340036
Option 2 ID : 264330340034
Option 3 ID : 264330340033
Option 4 ID : 264330340035
Status : **Marked For Review**
Chosen Option : 1

Q.4 In which year did India win its first Olympic gold in hockey?

- Ans 1. 1922
 2. 1956
 3. 1928
 4. 1960

Question ID : 264330134260
Option 1 ID : 264330526035
Option 2 ID : 264330526037
Option 3 ID : 264330526036
Option 4 ID : 264330526038
Status : Answered
Chosen Option : 3

Q.5 Read the given statements and select the correct option regarding 'High Powered Money'.

- (i) High Powered Money consists of currency and cash reserves with the bank.
(ii) High Powered Money includes demand deposits of the banks.

- Ans 1. Both (i) and (ii) are true
 2. Only (i) is true
 3. Both (i) and (ii) are false
 4. Only (ii) is true

Question ID : 264330118242
Option 1 ID : 264330464785
Option 2 ID : 264330464783
Option 3 ID : 264330464786
Option 4 ID : 264330464784
Status : Not Attempted and Marked For Review
Chosen Option : --

Q.6 Who set up the task force on Supportive Policy and Regulatory Framework for Micro-Finance in India in 1999?

- Ans 1. RRB
 2. Finance minister
 3. NABARD
 4. SBI

Question ID : 264330120872
Option 1 ID : 264330473705
Option 2 ID : 264330473706
Option 3 ID : 264330473704
Option 4 ID : 264330473703
Status : Marked For Review
Chosen Option : 3

Q.7 Which component of the cytoskeleton are rigid hollow rods, about 25 nm in diameter, that play an important role in the cell cycle by forming the mitotic spindle?

- Ans
- 1. Microfibers
 - 2. Intermediate filaments
 - 3. Actin filaments
 - 4. Microtubules

Question ID : 264330114600

Option 1 ID : 264330450485

Option 2 ID : 264330450488

Option 3 ID : 264330450486

Option 4 ID : 264330450487

Status : **Not Attempted and Marked For Review**

Chosen Option : --

Q.8 From which of the following cities did the Revolt of 1857 begin on 10 May 1857 in British India?

- Ans
- 1. Meerut
 - 2. Kanpur
 - 3. Delhi
 - 4. Jhansi

Question ID : 264330120257

Option 1 ID : 264330471286

Option 2 ID : 264330471285

Option 3 ID : 264330471283

Option 4 ID : 264330471284

Status : **Answered**

Chosen Option : 1

Q.9 Annatto seeds and extract is used as adulterant in:

- Ans
- 1. dairy products
 - 2. turmeric powder
 - 3. rice powder
 - 4. wheat flour

Question ID : 264330111906

Option 1 ID : 264330439709

Option 2 ID : 264330439710

Option 3 ID : 264330439711

Option 4 ID : 264330439712

Status : **Answered**

Chosen Option : 2

Q.10 Whose song 'Shaabaash' became the anthem of Indian athletes at the Commonwealth Games 2022?

- Ans
- 1. Jim Ankan Deka
 - 2. Jayanta Nath
 - 3. Nilotpal Bora
 - 4. Zubeen Garg

Question ID : 264330110250

Option 1 ID : 264330433278

Option 2 ID : 264330433277

Option 3 ID : 264330433279

Option 4 ID : 264330433280

Status : **Not Attempted and Marked For Review**

Chosen Option : --

Q.11 Under which Act was the legislative powers of making and amending laws restored to the provinces?

- Ans
- 1. Indian Council Act, 1892
 - 2. Indian Council Act, 1861
 - 3. Indian Council Act, 1909
 - 4. Regulating Act, 1773

Question ID : 264330132665

Option 1 ID : 264330519756

Option 2 ID : 264330519758

Option 3 ID : 264330519757

Option 4 ID : 264330519755

Status : **Marked For Review**

Chosen Option : 3

Q.12 How many medals did India win in the Commonwealth Games-2022?

- Ans
- 1. 61
 - 2. 59
 - 3. 58
 - 4. 57

Question ID : 264330113736

Option 1 ID : 264330447029

Option 2 ID : 264330447030

Option 3 ID : 264330447032

Option 4 ID : 264330447031

Status : **Not Attempted and Marked For Review**

Chosen Option : --

Q.13 Guru Bipin Singh was conferred the Kalidas Samman Award for which form of dance?

Ans 1. Manipuri

2. Kuchipudi

3. Odissi

4. Kathakali

Question ID : 26433080966

Option 1 ID : 264330317788

Option 2 ID : 264330317787

Option 3 ID : 264330317785

Option 4 ID : 264330317786

Status : Answered

Chosen Option : 1

Q.14 Who among the following musicians was shortlisted for the Bharat Ratna in 2019?

Ans 1. Bhupen Hazarika

2. Pandit Ravi Shankar

3. Lata Mangeshkar

4. Pandit Bhimsen Joshi

Question ID : 26433086941

Option 1 ID : 264330341408

Option 2 ID : 264330341405

Option 3 ID : 264330341406

Option 4 ID : 264330341407

Status : Answered

Chosen Option : 3

Q.15 Guru Vempati Chinna Satyam is associated with which of these dance forms?

Ans 1. Kuchipudi

2. Bharatanatyam

3. Manipuri

4. Odissi

Question ID : 264330109299

Option 1 ID : 264330429476

Option 2 ID : 264330429475

Option 3 ID : 264330429474

Option 4 ID : 264330429473

Status : Marked For Review

Chosen Option : 3

Q.16 _____ refers to the measure related to the sale of assets for the achievement of some purpose.

Ans 1. Total denationalisation

2. Joint venture

3. Management buyout

4. Liquidation

Question ID : 264330111617

Option 1 ID : 264330438553

Option 2 ID : 264330438554

Option 3 ID : 264330438556

Option 4 ID : 264330438555

Status : Answered

Chosen Option : 4

Q.17 Who among the following said that Raziyya was more able and /qualified than all her brothers for the Sultan of Delhi Sultanate?

- Ans
- 1. Qutb ud-Din Aibak
 - 2. Abdul Malik Isami
 - 3. Minhaj-i Siraj
 - 4. Ahmad Yadgar

Question ID : 264330111375
Option 1 ID : 264330437585
Option 2 ID : 264330437586
Option 3 ID : 264330437588
Option 4 ID : 264330437587
Status : Not Answered
Chosen Option : --

Q.18 निम्नलिखित में से कौन-सा कॉलम-A का कॉलम-B के साथ सही मिलान है?

कॉलम -A (अपमिश्रक)

- i. पपीते के बीज
- ii. आर्जीमोन के बीज
- iii. डिटर्जेंट
- iv. पीला ऐनिलीन रंजक

कॉलम -B (खाद्य सामग्री)

- a. हल्दी
- b. दुग्ध
- c. सरसों का तेल
- d. काली मिर्च

- Ans
- 1. i-c, ii-a, iii-b, iv-d
 - 2. i-c, ii-d, iii-a, iv-b
 - 3. i-d, ii-c, iii-b, iv-a
 - 4. i-c, ii-d, iii-b, iv-a

Question ID : 264330131807
Option 1 ID : 264330516327
Option 2 ID : 264330516328
Option 3 ID : 264330516330
Option 4 ID : 264330516329
Status : Answered
Chosen Option : 3

Q.19 The term 'chui' in judo means _____.

- Ans
- 1. warning
 - 2. throwing technique
 - 3. holding technique
 - 4. light penalty

Question ID : 264330118487
Option 1 ID : 264330465350
Option 2 ID : 264330465351
Option 3 ID : 264330465352
Option 4 ID : 264330465349
Status : Not Answered
Chosen Option : --

Q.20 Which of the following dams was NOT funded during the First Five-Year Plan for development of irrigation facility?

- Ans
- 1. Bhakra Nangal dam
 - 2. Hirakund dam
 - 3. Mettur dam
 - 4. Gosi Khurd dam

Question ID : 264330120884
Option 1 ID : 264330473751
Option 2 ID : 264330473752
Option 3 ID : 264330473753
Option 4 ID : 264330473754
Status : Marked For Review
Chosen Option : 4

Q.21 Which of the following deities was known as breaker of forts in the Rig Veda?

- Ans
- 1. Indra
 - 2. Agni
 - 3. Varuna
 - 4. Marut

Question ID : 264330119708
Option 1 ID : 264330469107
Option 2 ID : 264330469108
Option 3 ID : 264330469109
Option 4 ID : 264330469110
Status : Answered
Chosen Option : 1

Q.22 Which of the following Articles of the Indian Constitution, related to fundamental rights, CANNOT be suspended during an emergency?

- Ans
- 1. Articles 29-30
 - 2. Articles 17-18
 - 3. Articles 20-21
 - 4. Articles 31-32

Question ID : 264330113388
Option 1 ID : 264330445640
Option 2 ID : 264330445638
Option 3 ID : 264330445637
Option 4 ID : 264330445639
Status : Answered
Chosen Option : 3

Q.23 In the year 1855, the first jute mill was set up at Rishra, which is located in:

- Ans
- 1. Odisha
 - 2. West Bengal
 - 3. Andhra Pradesh
 - 4. Bihar

Question ID : 264330178713
Option 1 ID : 264330700880
Option 2 ID : 264330700882
Option 3 ID : 264330700879
Option 4 ID : 264330700881
Status : Marked For Review
Chosen Option : 2

Q.24 Dr. Karni Singh Shooting Range is located at:

- Ans 1. New Delhi
 2. Jaipur
 3. Bangalore
 4. Mumbai

Question ID : 264330118438
Option 1 ID : 264330465154
Option 2 ID : 264330465155
Option 3 ID : 264330465156
Option 4 ID : 264330465153
Status : Answered
Chosen Option : 2

Q.25 Which festival is also known as the foundation day of Khalsa Panth?

- Ans 1. Baisakhi
 2. Basant Panchami
 3. Gurupurab
 4. Lohri

Question ID : 264330111142
Option 1 ID : 264330436655
Option 2 ID : 264330436653
Option 3 ID : 264330436656
Option 4 ID : 264330436654
Status : Marked For Review
Chosen Option : 1

Q.26 Which of the following censuses recorded the highest gap in male and female literacy rates in India?

- Ans 1. 2001
 2. 1971
 3. 1991
 4. 1981

Question ID : 264330179555
Option 1 ID : 264330704222
Option 2 ID : 264330704219
Option 3 ID : 264330704221
Option 4 ID : 264330704220
Status : Marked For Review
Chosen Option : 2

Q.27 Who has written the famous novel 'Apsara'?

- Ans 1. Suryakant Tripathi Nirala
 2. Mahadevi Verma
 3. Sumitranandan Pant
 4. Jaishankar Prasad

Question ID : 26433064234
Option 1 ID : 264330251530
Option 2 ID : 264330251529
Option 3 ID : 264330251531
Option 4 ID : 264330251528
Status : Not Answered
Chosen Option : --

Q.28 The chemical name of Plaster of Paris is _____.

- Ans 1. calcium sulphate hemihydrate
 2. calcium sulphate semihydrate
 3. calcium hydrogen semihydrate
 4. calcium hydrogen hemihydrate

Question ID : 264330173639
Option 1 ID : 264330681035
Option 2 ID : 264330681038
Option 3 ID : 264330681037
Option 4 ID : 264330681036
Status : Marked For Review
Chosen Option : 2

Q.29 'Roads to Mussoorie', the famous novel is written by whom among the following Sahitya Akademi Awardee?

- Ans 1. Shobha Dey
 2. Ruskin Bond
 3. Mulk Raj Anand
 4. R K Narayan

Question ID : 264330112866
Option 1 ID : 264330443551
Option 2 ID : 264330443550
Option 3 ID : 264330443549
Option 4 ID : 264330443552
Status : Answered
Chosen Option : 4

Q.30 Which Article of the Indian Constitution mentions that it shall be the duty of every citizen of India to develop scientific temper?

- Ans 1. 51 A (j)
 2. 51 A (k)
 3. 51 A (h)
 4. 51 A (i)

Question ID : 264330183150
Option 1 ID : 264330718334
Option 2 ID : 264330718335
Option 3 ID : 264330718332
Option 4 ID : 264330718333
Status : Answered
Chosen Option : 2

Q.31 The Indira Sagar Multipurpose Project is located in which state?

- Ans 1. Madhya Pradesh
 2. Rajasthan
 3. Himachal Pradesh
 4. Tamil Nadu

Question ID : 264330120313
Option 1 ID : 264330471506
Option 2 ID : 264330471503
Option 3 ID : 264330471505
Option 4 ID : 264330471504
Status : Marked For Review
Chosen Option : 2

Q.32 Which of the following is the international partner in the implementation of 'PM Grameen Digital Saksharta Abhiyan'?

- Ans
- 1. UNDP
 - 2. World Bank
 - 3. UNESCO
 - 4. UNICEF

Question ID : 264330111590
Option 1 ID : 264330438448
Option 2 ID : 264330438447
Option 3 ID : 264330438446
Option 4 ID : 264330438445
Status : Answered
Chosen Option : 1

Q.33 Which part of the Constitution of India states that the citizen has to defend the country and render national service when called upon to do so?

- Ans
- 1. Part III A
 - 2. Part IV A
 - 3. Part II A
 - 4. Part V A

Question ID : 264330110783
Option 1 ID : 264330435410
Option 2 ID : 264330435411
Option 3 ID : 264330435409
Option 4 ID : 264330435412
Status : Answered
Chosen Option : 2

Q.34 Who among the following founded the Ramakrishna Mission in 1897?

- Ans
- 1. Sri Aurobindo
 - 2. Swami Vivekananda
 - 3. Sri Ramakrishna Paramhansa
 - 4. Raja Ram Mohan Roy

Question ID : 264330119007
Option 1 ID : 264330466685
Option 2 ID : 264330466684
Option 3 ID : 264330466683
Option 4 ID : 264330466686
Status : Answered
Chosen Option : 3

Q.35 _____ wrote a three-volume history of Akbar's reign, titled 'Akbar Nama'.

- Ans
- 1. Humayun
 - 2. Abul Fazi
 - 3. Bahadur Shah II
 - 4. Faizi

Question ID : 264330119769
Option 1 ID : 264330469353
Option 2 ID : 264330469352
Option 3 ID : 264330469354
Option 4 ID : 264330469351
Status : Answered
Chosen Option : 2

Q.36 Which Mughal emperor is known for designing a series of inlays behind his throne in the court at Delhi that depicted the legendary Greek god Orpheus playing the lute?

- Ans
- 1. Babur
 - 2. Humayun
 - 3. Shah Jahan
 - 4. Akbar

Question ID : 264330141814
Option 1 ID : 264330555575
Option 2 ID : 264330555578
Option 3 ID : 264330555576
Option 4 ID : 264330555577
Status : Answered
Chosen Option : 4

Q.37 The Dachigam National Park is best known as the home of the _____.

- Ans
- 1. hangul
 - 2. rhinoceros
 - 3. lion
 - 4. crocodile

Question ID : 264330181226
Option 1 ID : 264330710830
Option 2 ID : 264330710827
Option 3 ID : 264330710828
Option 4 ID : 264330710829
Status : Marked For Review
Chosen Option : 1

Q.38 Under which of the following Articles can a person directly approach the Supreme Court for the enforcement of his Fundamental Rights?

- Ans
- 1. Article 34
 - 2. Article 31
 - 3. Article 32
 - 4. Article 33

Question ID : 264330120097
Option 1 ID : 264330470646
Option 2 ID : 264330470643
Option 3 ID : 264330470644
Option 4 ID : 264330470645
Status : Answered
Chosen Option : 3

Q.39 Abdel Fattah al-Sisi, the Chief Guest of the Republic Day 2023 celebration in Delhi, is associated with which country?

- Ans
- 1. Syria
 - 2. Bahrain
 - 3. Egypt
 - 4. Israel

Question ID : 264330134251
Option 1 ID : 264330526000
Option 2 ID : 264330526002
Option 3 ID : 264330526001
Option 4 ID : 264330525999
Status : Answered
Chosen Option : 3

Q.40 Mount Fuji, the highest mountain in Japan, which is made of felsic to intermediate rock, represents which type of volcanoes?

- Ans 1. Composite
 2. Shield
 3. Fissure
 4. Cinder cone

Question ID : 264330141739
Option 1 ID : 264330555276
Option 2 ID : 264330555277
Option 3 ID : 264330555278
Option 4 ID : 264330555275
Status : Marked For Review
Chosen Option : 3

Q.41 Identify the Navratna of Akbar's court who played a pivotal role in the development of the classical genre of Hindustani music.

- Ans 1. Tansen
 2. Swami Haridas
 3. Mirabai
 4. Amir Khusro

Question ID : 264330111184
Option 1 ID : 264330436822
Option 2 ID : 264330436821
Option 3 ID : 264330436824
Option 4 ID : 264330436823
Status : Answered
Chosen Option : 1

Q.42 In 1991, India met with an economic crisis due to _____.

- Ans 1. political instability
 2. the rise in foreign exchange reserves
 3. low inflation
 4. huge debts burden

Question ID : 264330110019
Option 1 ID : 264330432356
Option 2 ID : 264330432353
Option 3 ID : 264330432354
Option 4 ID : 264330432355
Status : Answered
Chosen Option : 4

Q.43 Which of the following layers is important for living things?

- Ans 1. Troposphere
 2. Mesosphere
 3. Exosphere
 4. Stratosphere

Question ID : 264330116376
Option 1 ID : 264330457591
Option 2 ID : 264330457590
Option 3 ID : 264330457589
Option 4 ID : 264330457592
Status : Answered
Chosen Option : 4

Q.44 During the Fourth Five-Year Plan, the process of nationalisation of banks took place. How many banks were nationalised during this period?

- Ans
- 1. 6
 - 2. 14
 - 3. 10
 - 4. 20

Question ID : 264330109387
Option 1 ID : 264330429825
Option 2 ID : 264330429827
Option 3 ID : 264330429826
Option 4 ID : 264330429828
Status : Answered
Chosen Option : 2

Q.45 According to the census of India 2011, select the Union Territory that had less than 1 lakh population?

- Ans
- 1. Daman and Diu
 - 2. Lakshadweep
 - 3. Dadra and Nagar Haveli
 - 4. Puducherry

Question ID : 264330120327
Option 1 ID : 264330471561
Option 2 ID : 264330471562
Option 3 ID : 264330471560
Option 4 ID : 264330471559
Status : Answered
Chosen Option : 2

Q.46 According to the census of India 2011, what is the female literacy rate in Dadra and Nagar Haveli?

- Ans
- 1. 61.12%
 - 2. 76.48%
 - 3. 68.43%
 - 4. 64.32%

Question ID : 264330120478
Option 1 ID : 264330472165
Option 2 ID : 264330472163
Option 3 ID : 264330472166
Option 4 ID : 264330472164
Status : Answered
Chosen Option : 1

Q.47 What is the tenure of the President of India?

- Ans
- 1. 2 years
 - 2. 6 years
 - 3. 5 years
 - 4. 10 years

Question ID : 264330173514
Option 1 ID : 264330680535
Option 2 ID : 264330680537
Option 3 ID : 264330680536
Option 4 ID : 264330680538
Status : Answered
Chosen Option : 3

Q.48 In which of the following years was the Vernacular Press Act passed?

Ans 1. 1878

2. 1859

3. 1902

4. 1919

Question ID : 264330118596

Option 1 ID : 264330465636

Option 2 ID : 264330465635

Option 3 ID : 264330465637

Option 4 ID : 264330465638

Status : Answered

Chosen Option : 1

Q.49 Which of the following powers is NOT enjoyed by the Governor of a State?

Ans 1. Judiciary powers

2. Executive powers

3. Diplomatic/Military powers

4. Legislative powers

Question ID : 264330120510

Option 1 ID : 264330472293

Option 2 ID : 264330472291

Option 3 ID : 264330472294

Option 4 ID : 264330472292

Status : Answered

Chosen Option : 3

Q.50 For which of the following dance forms was Gaddam Padmaja Reddy awarded the Padma Shri in 2022?

Ans 1. Kuchipudi

2. Kathak

3. Bharatanatyam

4. Sattriya

Question ID : 264330111973

Option 1 ID : 264330439978

Option 2 ID : 264330439979

Option 3 ID : 264330439977

Option 4 ID : 264330439980

Status : Answered

Chosen Option : 1

Section : Reasoning

Q.1 Which of the following option figures will complete the pattern in the figure given below?

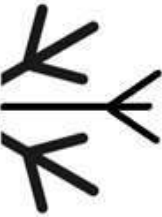


Ans

X 1.



X 2.



✓ 3.



X 4.



Question ID : 26433080604

Option 1 ID : 264330316349

Option 2 ID : 264330316352

Option 3 ID : 264330316351

Option 4 ID : 264330316350

Status : Answered

Chosen Option : 3

Q.2 Select the correct mirror image of the given figure when the mirror is placed at MN as shown below.



- Ans
- 1. $\gamma \partial \rho \rho \nabla$
 - 2. $\gamma \partial G P A$
 - 3. $\nabla \rho \rho \beta \nabla$
 - 4. $\gamma \partial \rho \rho A$

Question ID : 264330166662

Option 1 ID : 264330653687

Option 2 ID : 264330653688

Option 3 ID : 264330653690

Option 4 ID : 264330653689

Status : Answered

Chosen Option : 4

Q.3 Select the option that is related to the fifth number in the same way as the second number is related to the first number and fourth number is related to the third number.
 $64 : 23 :: 121 : 26 :: 256 : ?$

- Ans
- 1. 27
 - 2. 31
 - 3. 29
 - 4. 33

Question ID : 264330102517

Option 1 ID : 264330402499

Option 2 ID : 264330402498

Option 3 ID : 264330402497

Option 4 ID : 264330402500

Status : Not Attempted and Marked For Review

Chosen Option : --

Q.4 Which of the following terms will replace the question mark (?) in the given series?
RNVG, PPRK, ?, LTJS, JVFW

- Ans
- 1. MSNP
 - 2. NSNP
 - 3. MRMO
 - 4. NRNO

Question ID : 264330102186

Option 1 ID : 264330401212

Option 2 ID : 264330401211

Option 3 ID : 264330401209

Option 4 ID : 264330401210

Status : Answered

Chosen Option : 4

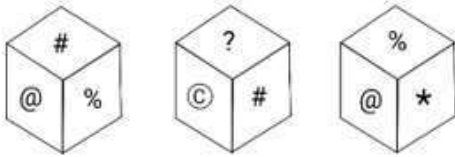
Q.5 Which two signs should be interchanged to make the following equation correct?

$$6 + 108 \div 12 - 24 \times 8 = 38$$

- Ans
- 1. - and ×
 - 2. - and +
 - 3. + and -
 - 4. + and ×

Question ID : 264330101079
Option 1 ID : 264330396863
Option 2 ID : 264330396862
Option 3 ID : 264330396861
Option 4 ID : 264330396864
Status : Answered
Chosen Option : 4

Q.6 A cube (dice) has six different symbols drawn over its six faces. Three different positions of this cube are shown in the given figure. Which symbol is on the face opposite to '*' (star)?



- Ans
- 1. %
 - 2. ?
 - 3. @
 - 4. #

Question ID : 264330113148
Option 1 ID : 264330444678
Option 2 ID : 264330444680
Option 3 ID : 264330444679
Option 4 ID : 264330444677
Status : Answered
Chosen Option : 4

Q.7 Select the figure that will replace the question mark (?) in the following figure series.



Ans

1.



2.



3.



4.



Question ID : 264330112032

Option 1 ID : 264330440213

Option 2 ID : 264330440216

Option 3 ID : 264330440214

Option 4 ID : 264330440215

Status : Answered

Chosen Option : 3

Q.8 Select the number from among the given options that can replace the question mark (?) in the following series.

300000, 90000, 27000, 8100, 2430, ?

Ans 1. 645

2. 729

3. 3255

4. 323

Question ID : 264330109751

Option 1 ID : 264330431284

Option 2 ID : 264330431282

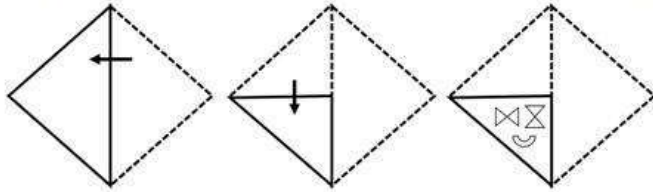
Option 3 ID : 264330431283

Option 4 ID : 264330431281

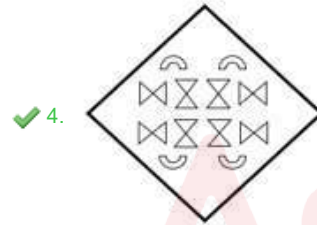
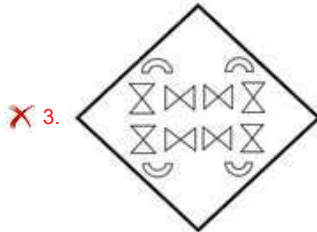
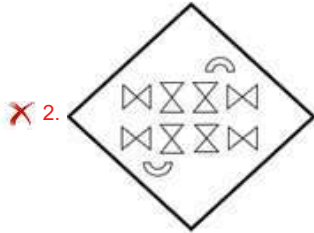
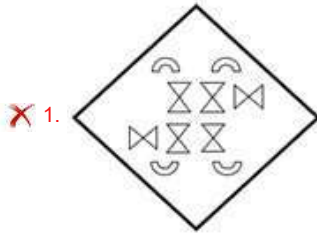
Status : Answered

Chosen Option : 2

Q.9 A paper is folded and cut as shown below. How will it appear when unfolded?



Ans



Question ID : 26433076504

Option 1 ID : 264330300081

Option 2 ID : 264330300083

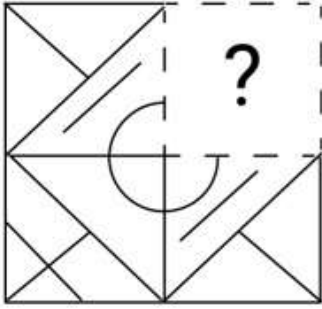
Option 3 ID : 264330300080

Option 4 ID : 264330300082

Status : Answered

Chosen Option : 4

Q.10 Select the figure from the options that can replace the question mark (?) and complete the given pattern.



Ans

- 1.
- 2.
- 3.
- 4.

Question ID : 264330106464

Option 1 ID : 264330418157

Option 2 ID : 264330418160

Option 3 ID : 264330418159

Option 4 ID : 264330418158

Status : Answered

Chosen Option : 4

Q.11 छह विद्यार्थी एक गोल मेज के परितः केंद्र की ओर अभिमुख होकर बैठे हैं। योजना और योगिता दोनों की निकटतम पड़ोसी यामिनी है। यशमिता, योजना के दाएं से दूसरे स्थान पर बैठी है। युक्ति, यामिनी के दाएं से दूसरे स्थान पर बैठी है। यश्वी, योगिता के दाएं से तीसरे स्थान पर बैठी है। युक्ति और यामिनी दोनों का निकटतम पड़ोसी कौन है?

- 1. यशमिता
- 2. योजना
- 3. योगिता
- 4. यश्वी

Question ID : 264330110716

Option 1 ID : 264330435143

Option 2 ID : 264330435144

Option 3 ID : 264330435141

Option 4 ID : 264330435142

Status : Answered

Chosen Option : 3

Q.12 Which figure should replace the question mark (?) if the following series were to be continued?

C	S	P	D	K	P	V	S	Z	V											
P	K	X	D	Z	C	S	V	V	Z	C	S	X	K	P	D	D	X	K	P	?
Z		V	K		X	X		D	Z		C	C		S						

Ans

✓ 1.

D		P	
C	Z	V	S
X		K	

✗ 2.

C		S	
Z	K	X	V
D		P	

✗ 3.

C		S	
P	K	X	D
Z		V	

✗ 4.

D		P	
C	X	K	S
Z		V	

Question ID : 264330103863

Option 1 ID : 264330407754

Option 2 ID : 264330407753

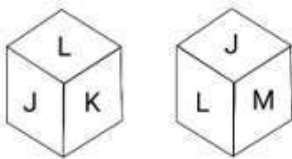
Option 3 ID : 264330407756

Option 4 ID : 264330407755

Status : Not Answered

Chosen Option : --

Q.13 Six letters, J, K, L, M, N and O, are written on the different faces of a dice. Two positions of this dice are shown in the given figure. Find the letter on the face opposite to K?



Ans ✗ 1. N

✓ 2. M

✗ 3. L

✗ 4. J

Question ID : 264330113147

Option 1 ID : 264330444676

Option 2 ID : 264330444673

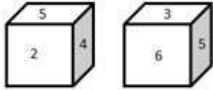
Option 3 ID : 264330444674

Option 4 ID : 264330444675

Status : Answered

Chosen Option : 2

Q.14 A dice with six faces is marked with six numbers 1, 2,3,4,5 and 6, respectively. It is rolled 2 times and lands on the positions shown below. Which number is on the opposite plane of 5?



- Ans
- 1. 1
 - 2. 6
 - 3. 2
 - 4. 3

Question ID : 264330110543

Option 1 ID : 264330434452

Option 2 ID : 264330434450

Option 3 ID : 264330434449

Option 4 ID : 264330434451

Status : Not Attempted and Marked For Review

Chosen Option : --

Q.15 If A denotes \div , B denotes \times , C denotes $+$ and D denotes $-$, then what will be the value of the following equation?
 $8 B 8 A 4 C 5 D 3 = ?$

- Ans
- 1. 17
 - 2. 19
 - 3. 21
 - 4. 18

Question ID : 26433085652

Option 1 ID : 264330336312

Option 2 ID : 264330336309

Option 3 ID : 264330336311

Option 4 ID : 264330336310

Status : Answered

Chosen Option : 4

Q.16 Select the correct mirror image of the given combination when the mirror is placed at 'PQ' as shown below.



- Ans
- 1. KRCRA
 - 2. KRCRA
 - 3. KRCRA
 - 4. KRCRA

Question ID : 264330129819

Option 1 ID : 264330508508

Option 2 ID : 264330508509

Option 3 ID : 264330508507

Option 4 ID : 264330508510

Status : Answered

Chosen Option : 4

Q.17 In a certain code language, if BEAUTY is coded as 3-6-2-22-21-26 and CREAM is coded as 4-19-6-2-14, then how will HONESTY be coded?

- Ans
- 1. 8-15-14-5-19-20-25
 - 2. 7-14-14-4-19-19-24
 - 3. 7-14-13-4-18-19-24
 - 4. 9-16-15-6-20-21-26

Question ID : 26433097448
Option 1 ID : 264330382481
Option 2 ID : 264330382484
Option 3 ID : 264330382482
Option 4 ID : 264330382483
Status : Answered
Chosen Option : 4

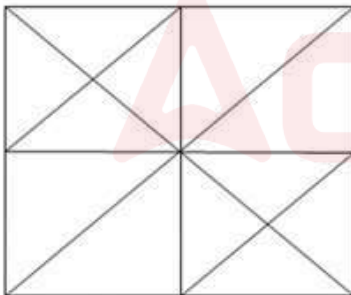
Q.18 Select the option that is related to the fifth letter-cluster in the same way as the second letter-cluster is related to the first letter-cluster and the fourth letter-cluster is related to the third letter-cluster.

TRUE : RPSC :: COPY : AMNW :: MIND : ?

- Ans
- 1. KGKB
 - 2. KGLB
 - 3. KGLA
 - 4. KGKA

Question ID : 26433076464
Option 1 ID : 264330299923
Option 2 ID : 264330299921
Option 3 ID : 264330299920
Option 4 ID : 264330299922
Status : Answered
Chosen Option : 2

Q.19 How many triangles are there in the following figure?



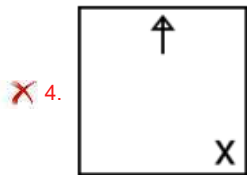
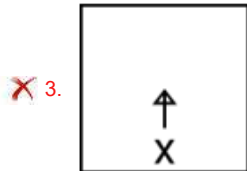
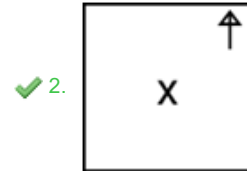
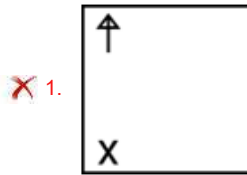
- Ans
- 1. 23
 - 2. 28
 - 3. 25
 - 4. 20

Question ID : 26433069080
Option 1 ID : 264330270834
Option 2 ID : 264330270833
Option 3 ID : 264330270835
Option 4 ID : 264330270832
Status : Answered
Chosen Option : 2

Q.20 Identify the figure given in the options which when put in place of the question mark (?), will logically complete the series.

		X		
↑	X	↑	↑	?
			X	

Ans



Question ID : 264330178425

Option 1 ID : 264330699745

Option 2 ID : 264330699744

Option 3 ID : 264330699746

Option 4 ID : 264330699743

Status : Answered

Chosen Option : 2

Q.21 Three statements are given followed by conclusions numbered 1, 2 and 3. Assuming the statements to be true, even if they seem to be at variance with commonly known facts, decide which of the conclusions logically follow(s) from the statements.

Statements:

1. All books are journals.
2. All journals are novels.
3. Some poems are novels.

Conclusions:

1. Some novels are books.
2. Some poems are journals.
3. All the journals are books.

- Ans**
- 1. Both conclusions 1 and 2 follow.
 - 2. Both conclusions 2 and 3 follow.
 - 3. Only conclusion 2 follows
 - 4. Only conclusion 1 follows.

Question ID : 26433068089

Option 1 ID : 264330266868

Option 2 ID : 264330266869

Option 3 ID : 264330266870

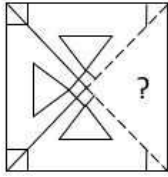
Option 4 ID : 264330266871

Status : Answered

Chosen Option : 1

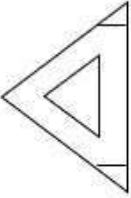


Q.22 Select the option figure that will replace the question mark (?) in the figure given below to complete the pattern.

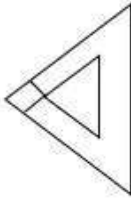


Ans

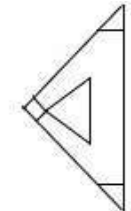
1.



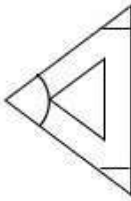
2.



3.



4.

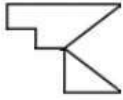


Question ID : 26433080838
Option 1 ID : 264330317287
Option 2 ID : 264330317285
Option 3 ID : 264330317288
Option 4 ID : 264330317286

Status : Answered

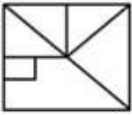
Chosen Option : 3

Q.23 Select the option in which the given figure is embedded (rotation is NOT allowed).

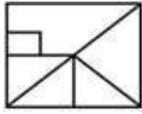


Ans

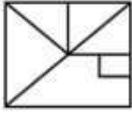
1.



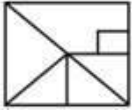
2.



3.



4.



Question ID : 264330101169

Option 1 ID : 264330397223

Option 2 ID : 264330397222

Option 3 ID : 264330397221

Option 4 ID : 264330397224

Status : Answered

Chosen Option : 2

Q.24 Select the set in which the numbers are related in the same way as are the numbers of the following sets.

(NOTE : Operations should be performed on the whole numbers, without breaking down the numbers into its constituent digits. E.g. 13 – Operations on 13 such as adding /deleting /multiplying etc. to 13 can be performed. Breaking down 13 into 1 and 3 and then performing mathematical operations on 1 and 3 is not allowed.)

(6, 36, 144)

(9, 81, 324)

Ans 1. (14, 196, 764)

2. (14, 196, 784)

3. (14, 186, 784)

4. (15, 195, 784)

Question ID : 264330175040

Option 1 ID : 264330686537

Option 2 ID : 264330686535

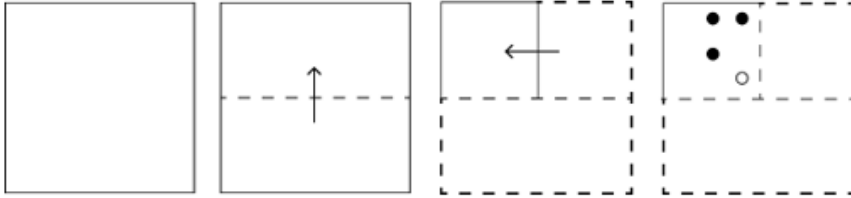
Option 3 ID : 264330686538

Option 4 ID : 264330686536

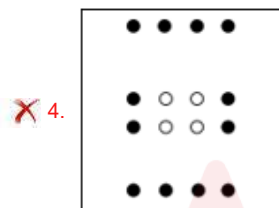
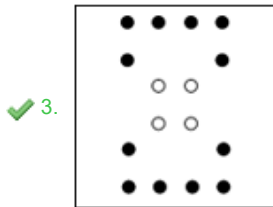
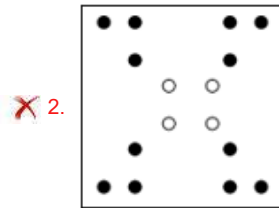
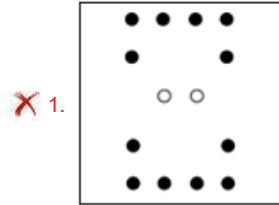
Status : Answered

Chosen Option : 2

Q.25 A square sheet of paper is folded along the dotted line successively along the directions shown and is then punched in the last. How would the paper look when unfolded?



Ans



Question ID : 264330172429

Option 1 ID : 264330676269

Option 2 ID : 264330676270

Option 3 ID : 264330676268

Option 4 ID : 264330676267

Status : Answered

Chosen Option : 3

Q.1 एक कार अपनी वास्तविक चाल के $\frac{5}{8}$ से चलते हुए 1 घंटा 20 मिनट 40 सेकंड में 52 km की दूरी तय करती है। कार की वास्तविक चाल (km/h में) कितनी है?

- Ans
- 1. 65.82
 - 2. 61.88
 - 3. 68.78
 - 4. 75.87

Question ID : 264330106079

Option 1 ID : 264330416617

Option 2 ID : 264330416618

Option 3 ID : 264330416619

Option 4 ID : 264330416620

Status : Not Attempted and Marked For Review

Chosen Option : --

Q.2 दसवीं कक्षा की एक परीक्षा में सभी विद्यार्थियों के औसत अंक 85 हैं। यदि सभी लड़कियों के अंकों का योग 3500 है और लड़कों के अंकों का योग 2025 है, तो कक्षा में विद्यार्थियों की संख्या ज्ञात कीजिए।

- Ans
- 1. 55
 - 2. 65
 - 3. 68
 - 4. 64

Question ID : 264330168959

Option 1 ID : 264330662639

Option 2 ID : 264330662641

Option 3 ID : 264330662642

Option 4 ID : 264330662640

Status : Answered

Chosen Option : 2

Q.3 एक दुकानदार किसी वस्तु का अंकित मूल्य उसके क्रय मूल्य से 45% अधिक पर निर्धारित करता है। 16% लाभ प्राप्त करने के लिए कितने प्रतिशत छूट दी जाएगी?

- Ans
- 1. 26%
 - 2. 29%
 - 3. 25%
 - 4. 20%

Question ID : 264330108885

Option 1 ID : 264330427820

Option 2 ID : 264330427819

Option 3 ID : 264330427818

Option 4 ID : 264330427817

Status : Answered

Chosen Option : 4

Q.4 यदि 483y718, अभाज्य संख्या 11 से विभाज्य है, जहाँ y एक अंक है, तो y का मान ज्ञात करें।

- Ans
- 1. 4
 - 2. 3
 - 3. 5
 - 4. 2

Question ID : 264330104349
Option 1 ID : 264330409699
Option 2 ID : 264330409698
Option 3 ID : 264330409700
Option 4 ID : 264330409697
Status : Answered
Chosen Option : 4

Q.5 ₹54,000 के मूलधन पर 2 वर्ष की अवधि के लिए समान वार्षिक ब्याज दर पर चक्रवृद्धि ब्याज और साधारण ब्याज के बीच का अंतर ₹1,215 है। ब्याज दर ज्ञात करें।

- Ans
- 1. 18%
 - 2. 10%
 - 3. 15%
 - 4. 12%

Question ID : 264330103987
Option 1 ID : 264330408252
Option 2 ID : 264330408249
Option 3 ID : 264330408251
Option 4 ID : 264330408250
Status : Not Attempted and Marked For Review
Chosen Option : --

Q.6 वह बड़ी से बड़ी संख्या ज्ञात करें, जो 60, 135 और 235 को विभाजित करने पर हर मामले में एक समान शेषफल देती है।

- Ans
- 1. 35
 - 2. 45
 - 3. 25
 - 4. 50

Question ID : 264330103914
Option 1 ID : 264330407959
Option 2 ID : 264330407960
Option 3 ID : 264330407957
Option 4 ID : 264330407958
Status : Answered
Chosen Option : 3

Q.7 $AB = AC$ और शीर्षलम्ब $AD = 9$ cm वाले एक समद्विबाहु त्रिभुज ABC का क्षेत्रफल 36 cm^2 है। इसका परिमाण क्या है?

- Ans
- 1. $4 + 2\sqrt{97}$ cm
 - 2. $10 + \sqrt{97}$ cm
 - 3. $8 + 2\sqrt{97}$ cm
 - 4. $6 + 2\sqrt{97}$ cm

Question ID : 264330119356

Option 1 ID : 264330467711

Option 2 ID : 264330467714

Option 3 ID : 264330467713

Option 4 ID : 264330467712

Status : Not Attempted and Marked For Review

Chosen Option : --

Q.8 The LCM of 148 and 205 is:

- Ans
- 1. 32640
 - 2. 25441
 - 3. 28540
 - 4. 30340

Question ID : 264330106059

Option 1 ID : 264330416538

Option 2 ID : 264330416537

Option 3 ID : 264330416540

Option 4 ID : 264330416539

Status : Answered

Chosen Option : 4

Q.9 दो उम्मीदवारों के बीच हुए एक चुनाव में, जीतने वाले उम्मीदवार को डाले गए मतों के 60% मत प्राप्त हुए और उसने 18,600 मतों से जीत दर्ज की। हारने वाले उम्मीदवार को कितने मत प्राप्त हुए?

- Ans
- 1. 36,400
 - 2. 34,600
 - 3. 37,200
 - 4. 35,800

Question ID : 264330129400

Option 1 ID : 264330506968

Option 2 ID : 264330506966

Option 3 ID : 264330506969

Option 4 ID : 264330506967

Status : Answered

Chosen Option : 3

Q.10 राहुल के पास 12 केले हैं। वह उनमें से x केलों को 20% के लाभ पर और शेष को 20% की हानि पर बेचता है। उसे पूरे परिव्यय पर 10% का लाभ होता है। x का मान ज्ञात कीजिए।

Ans 1. 10

2. 7

3. 9

4. 8

Question ID : 264330109533

Option 1 ID : 264330430412

Option 2 ID : 264330430409

Option 3 ID : 264330430411

Option 4 ID : 264330430410

Status : Answered

Chosen Option : 3

Q.11 एक पाइप को दो टुकड़ों में काटा जाता है। यदि छोटा टुकड़ा पाइप की लंबाई का 40% है तो छोटा टुकड़ा बड़े टुकड़े से कितने प्रतिशत छोटा है?

Ans 1. $33\frac{1}{3}\%$

2. $31\frac{2}{3}\%$

3. $28\frac{2}{3}\%$

4. $25\frac{1}{3}\%$

Question ID : 264330118202

Option 1 ID : 264330464623

Option 2 ID : 264330464625

Option 3 ID : 264330464624

Option 4 ID : 264330464626

Status : Answered

Chosen Option : 4

Q.12 यदि किसी पुस्तक के एक कॉलम में प्रिंट की गई 9 पंक्तियों में 36 शब्द हैं, तो 51 पंक्तियों के एक कॉलम में कितने शब्द होंगे?

Ans 1. 192

2. 196

3. 204

4. 208

Question ID : 264330182573

Option 1 ID : 264330716083

Option 2 ID : 264330716084

Option 3 ID : 264330716085

Option 4 ID : 264330716086

Status : Answered

Chosen Option : 3

Q.13 3 cm, 6 cm और 7 cm भुजाओं वाले त्रिभुज का क्षेत्रफल (cm² में) ज्ञात करें।

- Ans
- 1. $5\sqrt{6}$
 - 2. 4
 - 3. $\sqrt{5}$
 - 4. $4\sqrt{5}$

Question ID : 264330103997

Option 1 ID : 264330408292

Option 2 ID : 264330408290

Option 3 ID : 264330408291

Option 4 ID : 264330408289

Status : Not Attempted and Marked For Review

Chosen Option : --

Q.14 किस वार्षिक ब्याज दर पर ₹1,300 की राशि पर 10 वर्षों में साधारण ब्याज के रूप में ₹650 प्राप्त होगा?

- Ans
- 1. 7%
 - 2. 8%
 - 3. 4%
 - 4. 5%

Question ID : 264330182518

Option 1 ID : 264330715865

Option 2 ID : 264330715866

Option 3 ID : 264330715863

Option 4 ID : 264330715864

Status : Answered

Chosen Option : 4

Q.15 ₹1,900 की एक धनराशि को A, B और C में इस प्रकार बांटा जाता है कि B को A से ₹100 अधिक मिलते हैं और C को B से ₹200 अधिक मिलते हैं। उनके हिस्सों का अनुपात क्या है?

- Ans
- 1. 5 : 6 : 8
 - 2. 4 : 5 : 7
 - 3. 5 : 7 : 8
 - 4. 6 : 7 : 9

Question ID : 264330129428

Option 1 ID : 264330507078

Option 2 ID : 264330507079

Option 3 ID : 264330507081

Option 4 ID : 264330507080

Status : Answered

Chosen Option : 1

Q.1 एमएस एक्सेल 365 (MS Excel 365) में, एमएस एक्सेल (MS Excel) का निम्नलिखित में से कौन-सा चार्ट, ऐसे डेटा के विभिन्न आइटम (items) की तुलना करता है, जो समयावधि के साथ बदलते हैं और जिसमें कैटेगरी (categories) को क्षैतिज अक्ष तथा वैल्यू को ऊर्ध्वाधर अक्ष में व्यवस्थित किया जाता है?

- Ans
- 1. लाइन चार्ट (Line chart)
 - 2. कॉलम चार्ट (Column chart)
 - 3. पाई चार्ट (Pie chart)
 - 4. बार चार्ट (Bar chart)

Question ID : 264330180403
Option 1 ID : 264330707582
Option 2 ID : 264330707580
Option 3 ID : 264330707581
Option 4 ID : 264330707579
Status : Answered
Chosen Option : 1

Q.2 In MS Excel 365, how can we change page orientation in Print Preview?

- Ans
- 1. By using Show Margins
 - 2. By using Page Setup dialog box
 - 3. By using Zoom
 - 4. By using Print dialog box

Question ID : 264330182048
Option 1 ID : 264330714033
Option 2 ID : 264330714031
Option 3 ID : 264330714034
Option 4 ID : 264330714032
Status : Answered
Chosen Option : 4

Q.3 Which of the following parts of the email contains the address of the sender and recipient?

- Ans
- 1. Body
 - 2. Header
 - 3. Footer
 - 4. Complimentary close

Question ID : 264330175929
Option 1 ID : 264330690013
Option 2 ID : 264330690012
Option 3 ID : 264330690014
Option 4 ID : 264330690011
Status : Answered
Chosen Option : 2

Q.4 Which wireless technology allows devices to connect to the internet within the limited range of a wireless router?

- Ans
- 1. DSL
 - 2. LTE
 - 3. Wi-Fi
 - 4. 3G

Question ID : 264330182107
Option 1 ID : 264330714269
Option 2 ID : 264330714267
Option 3 ID : 264330714270
Option 4 ID : 264330714268
Status : Answered
Chosen Option : 3

Q.5 What is the general functionality of Mail Merge in the MS-Word 365?

- Ans
- 1. To restore the deleted emails
 - 2. To delete and remove bulk emails
 - 3. To create and receive bulk emails
 - 4. To create and send bulk emails

Question ID : 264330171413
Option 1 ID : 264330672269
Option 2 ID : 264330672267
Option 3 ID : 264330672270
Option 4 ID : 264330672268
Status : Answered
Chosen Option : 4

Q.6 Which area in MS-Word 365 contains icons for common tasks and actions, providing quick access to frequently used commands?

- Ans
- 1. Status Bar
 - 2. Ribbon
 - 3. Navigation Pane
 - 4. Quick Access Toolbar

Question ID : 264330173360
Option 1 ID : 264330679919
Option 2 ID : 264330679920
Option 3 ID : 264330679922
Option 4 ID : 264330679921
Status : Answered
Chosen Option : 4

Q.7 What is the definition of a workbook in Microsoft Excel 365?

- Ans
- 1. A workbook is a group of cells.
 - 2. A workbook is a group of worksheets.
 - 3. A workbook is a group of blocks.
 - 4. A workbook is a group of rows.

Question ID : 264330182046
Option 1 ID : 264330714024
Option 2 ID : 264330714025
Option 3 ID : 264330714026
Option 4 ID : 264330714023
Status : Answered
Chosen Option : 2

Q.8 Which of the following is used in MS Word 365 to split text into two or more columns?

- Ans
- 1. Rows
 - 2. Columns
 - 3. Margins
 - 4. Orientation

Question ID : 264330176712
Option 1 ID : 264330693063
Option 2 ID : 264330693064
Option 3 ID : 264330693066
Option 4 ID : 264330693065
Status : Answered
Chosen Option : 3

Q.9 Which option is used to paste copied text at a specific location in Microsoft Word 365?

- Ans
- 1. Paste As Hyperlink
 - 2. Paste Link
 - 3. Paste Special
 - 4. Paste Destination Styles

Question ID : 264330180705
Option 1 ID : 264330708789
Option 2 ID : 264330708788
Option 3 ID : 264330708787
Option 4 ID : 264330708790
Status : Answered
Chosen Option : 1

Q.10 What is the shortcut key to initiate a spelling check in Microsoft Word 365?

- Ans
- 1. F8
 - 2. F7
 - 3. F5
 - 4. F6

Question ID : 264330173584
Option 1 ID : 264330680818
Option 2 ID : 264330680817
Option 3 ID : 264330680815
Option 4 ID : 264330680816
Status : Answered
Chosen Option : 2

Constable Executive Male and Female in Delhi Police Examination 2023

Roll Number	
Candidate Name	
Venue Name	iON Digital Zone iDZ Jalalpur
Exam Date	29/11/2023
Exam Time	12:00 PM - 1:30 PM
Subject	Constable Executive Male and Female in Delhi Police Examination 2023

Section : General Knowledge

Q.1 Who among the following is the founder of the Vrindavan Gurukul in Mumbai and Vrindavan Gurukul in Bhubaneswar?

- Ans
- 1. Shivkumar Sharma
 - 2. M Balamurlikrishnan
 - 3. Hariprasad Chaurasia
 - 4. Bhimsen Joshi

Question ID : 264330114313
Option 1 ID : 264330449337
Option 2 ID : 264330449340
Option 3 ID : 264330449339
Option 4 ID : 264330449338
Status : Answered
Chosen Option : 2

Q.2 In 1889, _____ established the Mukti Mission, in Pune, a refuge for young widows who had been deserted and abused by their families.

- Ans
- 1. Pandita Ramabai
 - 2. Laxmi Sehgal
 - 3. Sarojini Naidu
 - 4. Kasturba Gandhi

Question ID : 264330114116
Option 1 ID : 264330448549
Option 2 ID : 264330448552
Option 3 ID : 264330448550
Option 4 ID : 264330448551
Status : Answered
Chosen Option : 1

Q.3 Which of the following is NOT an objective of the Fundamental Rights which are mentioned in the Indian Constitution?

- Ans
- 1. Promote the ideal of political democracy
 - 2. Prevent the establishment of an authoritarian and despotic rule
 - 3. Establish a government of laws and not of men
 - 4. Drive the citizens towards the objectives of the government

Question ID : 264330114756
Option 1 ID : 264330451109
Option 2 ID : 264330451110
Option 3 ID : 264330451111
Option 4 ID : 264330451112
Status : Answered
Chosen Option : 2

Q.4 The tribal dance Daang is associated with which Indian state?

- Ans 1. Gujarat
 2. Odisha
 3. Madhya Pradesh
 4. Karnataka

Question ID : 264330132395
Option 1 ID : 264330518676
Option 2 ID : 264330518675
Option 3 ID : 264330518677
Option 4 ID : 264330518678
Status : Answered
Chosen Option : 4

Q.5 Due to the need for irrigation facilities and pesticides/fertilisers, the first phase of the Green Revolution benefitted few affluent states such as _____.

- Ans 1. Punjab, Andhra Pradesh and Bihar
 2. Punjab, Andhra Pradesh and Tamil Nadu
 3. Punjab, Andhra Pradesh and Uttar Pradesh
 4. Punjab, Arunachal Pradesh and Uttar Pradesh

Question ID : 264330114281
Option 1 ID : 264330449211
Option 2 ID : 264330449212
Option 3 ID : 264330449209
Option 4 ID : 264330449210
Status : Answered
Chosen Option : 3

Q.6 The brittle crust and the top part of the upper mantle of the earth is called:

- Ans 1. asthenosphere
 2. lithosphere
 3. mesosphere
 4. stratosphere

Question ID : 264330131814
Option 1 ID : 264330516355
Option 2 ID : 264330516356
Option 3 ID : 264330516358
Option 4 ID : 264330516357
Status : Answered
Chosen Option : 2

Q.7 Consider the following statements with respect to establishment of SEWA Bank, a microfinance institution in India.

(i) SEWA Bank was established in 1974.

(ii) SEWA Bank was established in Gujarat.

(iii) SEWA Bank was established by the Self-employed Women's Association.

Choose the correct answer.

- Ans 1. Only (iii) is true
2. (i), (ii) and (iii) are true
3. Only (i) is true
4. Only (ii) is true

Question ID : 264330116501

Option 1 ID : 264330458091

Option 2 ID : 264330458092

Option 3 ID : 264330458089

Option 4 ID : 264330458090

Status : Not Answered

Chosen Option : --

Q.8 From which country is the concept of independence of the judiciary in the Indian Constitution taken?

- Ans 1. Australia
2. United States of America
3. Germany
4. South Africa

Question ID : 264330183144

Option 1 ID : 264330718309

Option 2 ID : 264330718311

Option 3 ID : 264330718310

Option 4 ID : 264330718308

Status : Answered

Chosen Option : 2

Q.9 In which Olympics did PV Sindhu win a silver medal?

- Ans 1. 2016 Summer Olympics (Rio)
2. 2008 Summer Olympics (Beijing)
3. 2012 Summer Olympics (London)
4. 2020 Summer Olympics (Tokyo)

Question ID : 264330144214

Option 1 ID : 264330565117

Option 2 ID : 264330565115

Option 3 ID : 264330565118

Option 4 ID : 264330565116

Status : Answered

Chosen Option : 1

Q.10 Which of the following mausoleum shapes was found in the architecture of the Lodhi dynasty?

- Ans 1. Cylindrical
 2. Octagonal
 3. Circular
 4. Spherical

Question ID : 264330106238
Option 1 ID : 264330417254
Option 2 ID : 264330417256
Option 3 ID : 264330417253
Option 4 ID : 264330417255
Status : Answered
Chosen Option : 4

Q.11 Name the dance form of North-West India in which dancers emulate the movements of snakes?

- Ans 1. Siddi Dhamal
 2. Tera Tali
 3. Garba
 4. Kalbeliya

Question ID : 264330110422
Option 1 ID : 264330433965
Option 2 ID : 264330433967
Option 3 ID : 264330433966
Option 4 ID : 264330433968
Status : Answered
Chosen Option : 4

Q.12 Who among the following is the fourth Chief Election Commissioner of India?

- Ans 1. T Swaminathan
 2. Nagendra Singh
 3. SP Sen Verma
 4. KVK Sundaram

Question ID : 264330139435
Option 1 ID : 264330546174
Option 2 ID : 264330546173
Option 3 ID : 264330546172
Option 4 ID : 264330546171
Status : Not Answered
Chosen Option : --

Q.13 In which of the following cases does revenue deficit occur?

- Ans 1. When the government's total revenue exceeds its expenditure
 2. When the government's revenue is added to its expenditure
 3. When the government's total revenue is less than its expenditure
 4. When the government's total revenue is equal to its expenditure

Question ID : 264330120870
Option 1 ID : 264330473697
Option 2 ID : 264330473698
Option 3 ID : 264330473696
Option 4 ID : 264330473695
Status : Answered
Chosen Option : 3

Q.14 In which year was the Pradhan Mantri Kaushal Vikas Yojana launched?

- Ans 1. 2017
 2. 2016
 3. 2014
 4. 2015

Question ID : 264330138079
Option 1 ID : 264330540926
Option 2 ID : 264330540924
Option 3 ID : 264330540925
Option 4 ID : 264330540923
Status : Answered
Chosen Option : 4

Q.15 Kalaguru Bishnu Rabha Award is given by which government in the field of dance and music?

- Ans 1. Assam
 2. West Bengal
 3. Tripura
 4. Arunachal Pradesh

Question ID : 26433086664
Option 1 ID : 264330340299
Option 2 ID : 264330340298
Option 3 ID : 264330340297
Option 4 ID : 264330340300
Status : Not Answered
Chosen Option : --

Q.16 The Khilafat Movement started in India _____.

- Ans 1. to defend the Islamic caliphate in Turkey
 2. to oppose the massacre at Jallianwala Bagh
 3. to protest against communal electorates
 4. to oppose the restrictions upon freedom of press

Question ID : 264330118996
Option 1 ID : 264330466642
Option 2 ID : 264330466639
Option 3 ID : 264330466641
Option 4 ID : 264330466640
Status : Answered
Chosen Option : 2

Q.17 Chhath Pooja is mainly celebrated in which of these states?

- Ans 1. Bihar
 2. Haryana
 3. Odisha
 4. Punjab

Question ID : 264330108884
Option 1 ID : 264330427814
Option 2 ID : 264330427813
Option 3 ID : 264330427816
Option 4 ID : 264330427815
Status : Answered
Chosen Option : 1

Q.18 As per the recent NFHS-5 (2019-21) report, what percentage of children under the age of five are underweight in our country?

- Ans
- 1. 29.2%
 - 2. 32.1%
 - 3. 21.0%
 - 4. 38.1%

Question ID : 264330141710
Option 1 ID : 264330555160
Option 2 ID : 264330555162
Option 3 ID : 264330555161
Option 4 ID : 264330555159
Status : Not Answered
Chosen Option : --

Q.19 Which of the following features conveys the meaning 'creating equalitarian society' ?

- Ans
- 1. Written Constitution
 - 2. Emergency provisions
 - 3. Federal system
 - 4. Fundamental Rights

Question ID : 264330110559
Option 1 ID : 264330434516
Option 2 ID : 264330434513
Option 3 ID : 264330434514
Option 4 ID : 264330434515
Status : Answered
Chosen Option : 4

Q.20 In which of the following countries will you find the Magar and Tharu ethnic communities?

- Ans
- 1. Nepal
 - 2. Afghanistan
 - 3. Bhutan
 - 4. Sri Lanka

Question ID : 264330177917
Option 1 ID : 264330697755
Option 2 ID : 264330697756
Option 3 ID : 264330697757
Option 4 ID : 264330697758
Status : Answered
Chosen Option : 4

Q.21 Which of the following sets consists of only compounds?

- A) Sugar solution, Calcium carbonate, Methane, Baking soda
- B) Sugar, Calcium carbonate, Methane, Baking soda
- C) Sugar solution, Calcium, Methane, Baking soda
- D) Sugar solution, Calcium carbonate, Methane, Soda water

Ans 1. A

2. C

3. B

4. D

Question ID : 264330182938

Option 1 ID : 264330717484

Option 2 ID : 264330717486

Option 3 ID : 264330717485

Option 4 ID : 264330717487

Status : Answered

Chosen Option : 1

Q.22 What was the launch year of 'Pandit Deen Dayal Upadhyay Unnat Krishi Shiksha Yojana'?

Ans 1. 2000

2. 1998

3. 2016

4. 2015

Question ID : 264330111585

Option 1 ID : 264330438426

Option 2 ID : 264330438425

Option 3 ID : 264330438428

Option 4 ID : 264330438427

Status : Answered

Chosen Option : 3

Q.23 The city of Kolar in Karnataka is renowned for its _____ mines.

Ans 1. gold

2. silver

3. limestone

4. copper

Question ID : 264330176004

Option 1 ID : 264330690314

Option 2 ID : 264330690311

Option 3 ID : 264330690313

Option 4 ID : 264330690312

Status : Answered

Chosen Option : 3

Q.24 Which article empowers the Supreme Court to exercise the jurisdiction and powers of the federal court under any pre-constitution law?

- Ans
- 1. Article 135
 - 2. Article 139
 - 3. Article 144
 - 4. Article 140

Question ID : 264330166152
Option 1 ID : 264330651675
Option 2 ID : 264330651676
Option 3 ID : 264330651678
Option 4 ID : 264330651677
Status : Not Answered
Chosen Option : --

Q.25 Which climatologist collaborated with Koppen in 1961 to modify the scheme of climate classification?

- Ans
- 1. Nerilie Abram
 - 2. Richard Alley
 - 3. Jacob Bjerknes
 - 4. Rudolf Geiger

Question ID : 264330131013
Option 1 ID : 264330513163
Option 2 ID : 264330513165
Option 3 ID : 264330513164
Option 4 ID : 264330513166
Status : Not Answered
Chosen Option : --

Q.26 In which year did Indian Railways start its first computerised reservation in New Delhi?

- Ans
- 1. 1992
 - 2. 1996
 - 3. 2001
 - 4. 1986

Question ID : 264330181290
Option 1 ID : 264330711083
Option 2 ID : 264330711084
Option 3 ID : 264330711086
Option 4 ID : 264330711085
Status : Answered
Chosen Option : 2

Q.27 Which hymn from the Rigveda was used by the Brahmanas of ancient India to justify the Varna system?

- Ans
- 1. Varna Sukta
 - 2. Brahm Sukta
 - 3. Manas Sukta
 - 4. Purusha Sukta

Question ID : 264330118963
Option 1 ID : 264330466507
Option 2 ID : 264330466508
Option 3 ID : 264330466510
Option 4 ID : 264330466509
Status : Answered
Chosen Option : 1

Q.28 IR-8 is a dwarf variety of which crop?

- Ans 1. Maize
 2. Rice
 3. Barley
 4. Wheat

Question ID : 264330109402
Option 1 ID : 264330429888
Option 2 ID : 264330429885
Option 3 ID : 264330429887
Option 4 ID : 264330429886
Status : Answered
Chosen Option : 2

Q.29 The Olympic Games was organised in Asia for the first time in _____.

- Ans 1. 1968
 2. 1956
 3. 1960
 4. 1964

Question ID : 264330110373
Option 1 ID : 264330433771
Option 2 ID : 264330433772
Option 3 ID : 264330433769
Option 4 ID : 264330433770
Status : Answered
Chosen Option : 4

Q.30 The Chandela dynasty of Rajput clan ruled which of the following regions between 9th and 13th century in early medieval period of India?

- Ans 1. Amarkot
 2. Jaisalmer
 3. Bundelkhand
 4. Mewar

Question ID : 264330176886
Option 1 ID : 264330693745
Option 2 ID : 264330693746
Option 3 ID : 264330693744
Option 4 ID : 264330693743
Status : Answered
Chosen Option : 3

Q.31 Who among the following started the 'Shuddhi Movement' to bring back converted Hindus to the main Hindu society?

- Ans 1. Ishwar Chand Vidyasagar
 2. Swami Sahjanand
 3. Swami Dayanand
 4. Swami Vivekanand

Question ID : 264330117689
Option 1 ID : 264330462754
Option 2 ID : 264330462752
Option 3 ID : 264330462753
Option 4 ID : 264330462751
Status : Answered
Chosen Option : 3

Q.32 Who among the following was chosen by Gandhiji as the first Satyagrahi of the individual Satyagraha movement?

- Ans
- 1. Dr. BR Ambedkar
 - 2. C Rajagopalachari
 - 3. Gopal Krishna Gokhale
 - 4. Acharya Vinoba Bhave

Question ID : 264330119746
Option 1 ID : 264330469260
Option 2 ID : 264330469261
Option 3 ID : 264330469259
Option 4 ID : 264330469262
Status : Answered
Chosen Option : 2

Q.33 Who among the following chroniclers wrote his first chronicle in 1356?

- Ans
- 1. Minhaj-us-Siraj
 - 2. Ziyauddin Barani
 - 3. Ibn-Sina
 - 4. Al-Biruni

Question ID : 264330183099
Option 1 ID : 264330718128
Option 2 ID : 264330718130
Option 3 ID : 264330718131
Option 4 ID : 264330718129
Status : Answered
Chosen Option : 4

Q.34 Deba Prasad Das, Pankaj Charan Das and Gangadhar Pradhan were the famous exponents of which of the following dance forms?

- Ans
- 1. Odissi
 - 2. Sattriya
 - 3. Bharatnatyam
 - 4. Kathak

Question ID : 264330110440
Option 1 ID : 264330434038
Option 2 ID : 264330434040
Option 3 ID : 264330434039
Option 4 ID : 264330434037
Status : Answered
Chosen Option : 2

Q.35 The deficiency of iodine causes _____.

- Ans
- 1. Beriberi
 - 2. Scurvy
 - 3. Rickets
 - 4. goitre

Question ID : 264330117598
Option 1 ID : 264330462418
Option 2 ID : 264330462419
Option 3 ID : 264330462420
Option 4 ID : 264330462417
Status : Answered
Chosen Option : 2

Q.36 By which of the following authors is the English novel 'Three Men in a Boat' written?

- Ans 1. Robert Louis Stevenson
 2. Arthur Conan Doyle
 3. Mark Twain
 4. Jerome K Jerome

Question ID : 26433066680
Option 1 ID : 264330261246
Option 2 ID : 264330261245
Option 3 ID : 264330261244
Option 4 ID : 264330261247
Status : Answered
Chosen Option : 3

Q.37 मानव विकास रिपोर्ट 2021-22 के अनुसार, भारत की समग्र बहुआयामी निर्धनता में स्वास्थ्य अभाव (health deprivation) का प्रतिशत अंश कितना है?

- Ans 1. 41.3%
 2. 18.5%
 3. 31.9%
 4. 31.3%

Question ID : 264330179560
Option 1 ID : 264330704240
Option 2 ID : 264330704241
Option 3 ID : 264330704239
Option 4 ID : 264330704242
Status : Answered
Chosen Option : 4

Q.38 Which of the following was the revenue collecting officer (collector general of revenue) in the Mauryan administration?

- Ans 1. Antapala
 2. Samaharta
 3. Sannidhata
 4. Amatya

Question ID : 264330120418
Option 1 ID : 264330471923
Option 2 ID : 264330471926
Option 3 ID : 264330471924
Option 4 ID : 264330471925
Status : Not Answered
Chosen Option : --

Q.39 The English novel 'The Rainbow' was written by which of the following authors?

- Ans 1. Thomas Hardy
 2. Joseph Conrad
 3. Emily Bronte
 4. D. H. Lawrence

Question ID : 26433055374
Option 1 ID : 264330216481
Option 2 ID : 264330216480
Option 3 ID : 264330216483
Option 4 ID : 264330216482
Status : Not Answered
Chosen Option : --

Q.40 भारत की पशुधन जनगणना 2019 के अनुसार, निम्नलिखित में से किस श्रेणी के पशुधन की जनसंख्या सबसे अधिक दर्ज की गई?

- Ans 1. मवेशी
 2. बकरी
 3. भैंस
 4. भेड़

Question ID : 264330181104
Option 1 ID : 264330710359
Option 2 ID : 264330710362
Option 3 ID : 264330710360
Option 4 ID : 264330710361
Status : Answered
Chosen Option : 3

Q.41 Which of the following was first introduced in bacterial cells by the American molecular biologist Joshua Lederberg in 1952?

- Ans 1. Pili
 2. Capsule
 3. Plasmid
 4. Cytoplasm

Question ID : 264330130991
Option 1 ID : 264330513076
Option 2 ID : 264330513075
Option 3 ID : 264330513078
Option 4 ID : 264330513077
Status : Answered
Chosen Option : 4

Q.42 Who among the following became the first Indian to be signed by Elektra Records, a U.S. company in October 2020?

- Ans 1. Vipin Aneja
 2. Prateek Kuhad
 3. Kulwinder Dhillon
 4. Jim Ankan Deka

Question ID : 264330113244
Option 1 ID : 264330445061
Option 2 ID : 264330445062
Option 3 ID : 264330445064
Option 4 ID : 264330445063
Status : Not Answered
Chosen Option : --

Q.43 Mumbai's famous Gateway of India was built in the memory of which British emperor's first arrival in India?

- Ans
- 1. Ani Stuart
 - 2. William IV
 - 3. Charles I
 - 4. King George V

Question ID : 26433074101
Option 1 ID : 264330290526
Option 2 ID : 264330290527
Option 3 ID : 264330290525
Option 4 ID : 264330290524
Status : Answered
Chosen Option : 4

Q.44 Habeas Corpus is the writ issued by the Court to bring before a court _____.

- Ans
- 1. a person from illegal custody
 - 2. a person to perform his legal duty
 - 3. a tribunal from doing something in excess
 - 4. a person who occupies a public office

Question ID : 264330110132
Option 1 ID : 264330432807
Option 2 ID : 264330432808
Option 3 ID : 264330432805
Option 4 ID : 264330432806
Status : Answered
Chosen Option : 1

Q.45 _____ refers to relaxation of government restrictions.

- Ans
- 1. Liberalisation
 - 2. Disinvestment
 - 3. Privatisation
 - 4. Globalisation

Question ID : 264330110018
Option 1 ID : 264330432352
Option 2 ID : 264330432351
Option 3 ID : 264330432349
Option 4 ID : 264330432350
Status : Answered
Chosen Option : 1

Q.46 निम्नलिखित में से किस मंत्रालय के पास दिल्ली में गणतंत्र दिवस परेड आयोजित करने की जिम्मेदारी है?

- Ans
- 1. संस्कृति मंत्रालय
 - 2. नागरिक उड्डयन मंत्रालय
 - 3. रक्षा मंत्रालय
 - 4. गृह मंत्रालय

Question ID : 264330118489
Option 1 ID : 264330465358
Option 2 ID : 264330465360
Option 3 ID : 264330465357
Option 4 ID : 264330465359
Status : Answered
Chosen Option : 3

Q.47 Which of the following Articles of the Indian Constitution declares that all laws that are inconsistent with or in derogation of the Fundamental Rights shall be void?

- Ans**
- 1. Article 226
 - 2. Article 32
 - 3. Article 13
 - 4. Article 12

Question ID : 264330114758
Option 1 ID : 264330451119
Option 2 ID : 264330451118
Option 3 ID : 264330451120
Option 4 ID : 264330451117
Status : Answered
Chosen Option : 3

Q.48 U19 T20 Women's World Cup 2023 was organised by _____ .

- Ans**
- 1. England
 - 2. New Zealand
 - 3. Australia
 - 4. South Africa

Question ID : 264330132539
Option 1 ID : 264330519251
Option 2 ID : 264330519252
Option 3 ID : 264330519253
Option 4 ID : 264330519254
Status : Answered
Chosen Option : 3

Q.49 Which of the following bodies looked after the various aspects of the Competition Act 2002?

- Ans**
- 1. SEBI
 - 2. UPSC
 - 3. Competition Commission of India
 - 4. Reserve Bank of India

Question ID : 264330111622
Option 1 ID : 264330438576
Option 2 ID : 264330438573
Option 3 ID : 264330438574
Option 4 ID : 264330438575
Status : Answered
Chosen Option : 3

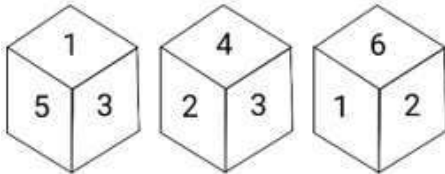
Q.50 In Kabaddi, how many players per team are allowed on the field of play at any one time?

- Ans
- 1. 12
 - 2. 10
 - 3. 8
 - 4. 7

Question ID : 264330113770
Option 1 ID : 264330447166
Option 2 ID : 264330447168
Option 3 ID : 264330447167
Option 4 ID : 264330447165
Status : Answered
Chosen Option : 3

Section : Reasoning

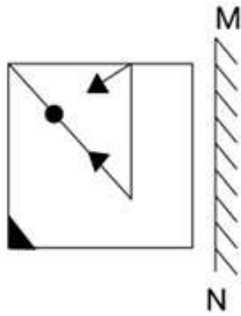
Q.1 Three different positions of the same dice are shown. Find the number on the face opposite to the face showing '2'.



- Ans
- 1. 1
 - 2. 4
 - 3. 3
 - 4. 5

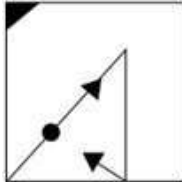
Question ID : 264330112036
Option 1 ID : 264330440229
Option 2 ID : 264330440230
Option 3 ID : 264330440231
Option 4 ID : 264330440232
Status : Answered
Chosen Option : 4

Q.2 Select the correct mirror image of the given combination when the mirror is placed at 'MN' as shown below.

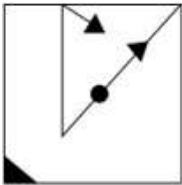


Ans

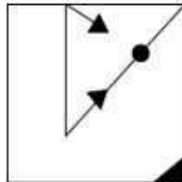
✗ 1.



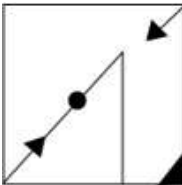
✗ 2.



✓ 3.



✗ 4.



Question ID : 264330130763

Option 1 ID : 264330512166

Option 2 ID : 264330512164

Option 3 ID : 264330512165

Option 4 ID : 264330512163

Status : Answered

Chosen Option : 3

Q.3 In a certain code language, 'BATH' is written as '542311' and 'FUND' is written as '924177'. How will 'GOLD' be written in that language?

Ans ✗ 1. 914156

✗ 2. 915157

✗ 3. 1016179

✓ 4. 1018157

Question ID : 26433089408

Option 1 ID : 264330351136

Option 2 ID : 264330351133

Option 3 ID : 264330351134

Option 4 ID : 264330351135

Status : Answered

Chosen Option : 4

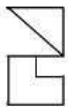
Q.4 Which two signs should be interchanged to make the following equation correct?

$$144 \div 12 + 6 \times 3 - 14 = 8$$

- Ans
- 1. + and ×
 - 2. + and ×
 - 3. - and ×
 - 4. - and +

Question ID : 264330101084
Option 1 ID : 264330396884
Option 2 ID : 264330396881
Option 3 ID : 264330396883
Option 4 ID : 264330396882
Status : Answered
Chosen Option : 4

Q.5 Select the option in which the given figure is embedded (rotation is NOT allowed).



Ans

- 1.
- 2.
- 3.
- 4.

Question ID : 264330101170
Option 1 ID : 264330397227
Option 2 ID : 264330397226
Option 3 ID : 264330397228
Option 4 ID : 264330397225
Status : Answered
Chosen Option : 3

Q.6 Select the number from among the given options that can replace the question mark (?) in the following series.

15, 24, 42, 78, 150, ?

- Ans
- 1. 5432
 - 2. 323
 - 3. 294
 - 4. 452

Question ID : 264330109749

Option 1 ID : 264330431274

Option 2 ID : 264330431273

Option 3 ID : 264330431276

Option 4 ID : 264330431275

Status : Answered

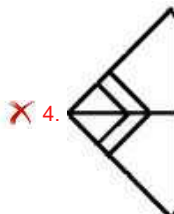
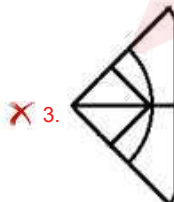
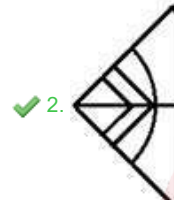
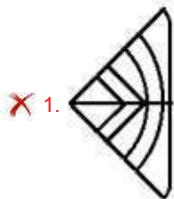
Chosen Option : 3

Q.7 Select the option figure that will replace the question mark (?) in the figure given below to

complete the pattern.



Ans



Question ID : 26433089463

Option 1 ID : 264330351356

Option 2 ID : 264330351355

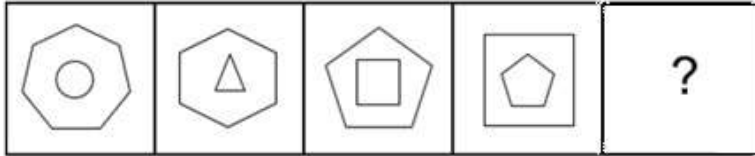
Option 3 ID : 264330351354

Option 4 ID : 264330351353

Status : Answered

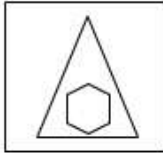
Chosen Option : 2

Q.8 Select the figure that will replace the question mark (?) in the following figure series.

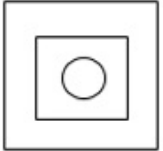


Ans

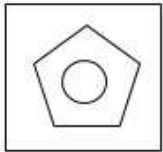
✓ 1.



✗ 2.



✗ 3.



✗ 4.



Question ID : 264330108961

Option 1 ID : 264330428121

Option 2 ID : 264330428122

Option 3 ID : 264330428123

Option 4 ID : 264330428124

Status : Answered

Chosen Option : 1

Q.9 Two statements are given followed by two conclusions numbered I and II. Assuming the statements to be true, even if they seem to be at variance from commonly known facts, decide which of the conclusions logically follow(s) from the statements.

Statements:

All Mugs are Buckets.

Some Mugs are Tumblers.

Conclusions:

I. All Tumblers are Mugs.

II. All Buckets are Tumblers.

Ans ✗ 1. Only conclusion I follows.

✗ 2. Both conclusions I and II follow.

✓ 3. Neither conclusion I nor II follows.

✗ 4. Only conclusion II follows.

Question ID : 26433076599

Option 1 ID : 264330300460

Option 2 ID : 264330300462

Option 3 ID : 264330300463

Option 4 ID : 264330300461

Status : Answered

Chosen Option : 3

Q.10 Select the correct mirror image of the given combination when the mirror is placed at 'PQ' as shown below.

GZEK4L | P
Q

Ans

- ✓ 1. JAK3ZG
- ✗ 2. GZEK4L
- ✗ 3. JAK3ZG
- ✗ 4. ZGK4LJ

Question ID : 264330129812

Option 1 ID : 264330508479


Option 2 ID : 264330508481

Option 3 ID : 264330508480

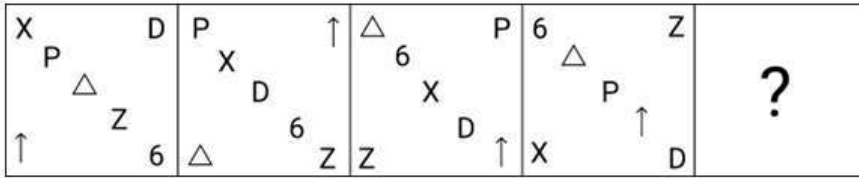
Option 4 ID : 264330508482

Status : Answered

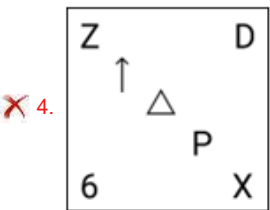
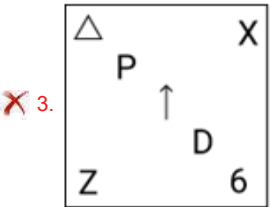
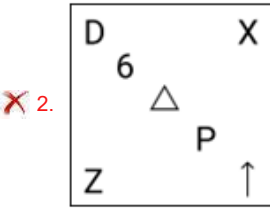
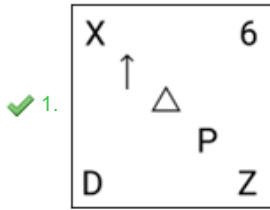
Chosen Option : 1



Q.11 Which figure should replace the question mark (?) in the following series to continue the pattern?



Ans



Question ID : 264330129616

Option 1 ID : 264330507832

Option 2 ID : 264330507830

Option 3 ID : 264330507833

Option 4 ID : 264330507831

Status : Answered

Chosen Option : 2

Q.12 Which figure should replace the question mark (?) in the following series to continue the pattern?

O	3	3	S	S	=	=	O	
	D		=		3		6	?
6	=	S	O	D	6	D	6	O
						S	3	D

Ans

✗ 1.

D		6
	S	
O	=	3

✗ 2.

6		=
	O	
D	S	3

✗ 3.

D		=
	O	
6	S	3

✓ 4.

O		6
	=	
3	D	S

Question ID : 264330129618
 Option 1 ID : 264330507839
 Option 2 ID : 264330507840
 Option 3 ID : 264330507841
 Option 4 ID : 264330507838
 Status : Answered
 Chosen Option : 4

Q.13 Select the option that is related to the fourth term in the same way as the first term is related to the second term and the fifth term is related to the sixth term.
 126 : 14 :: ? : 38 :: 207 : 23

- Ans
- ✓ 1. 342
 - ✗ 2. 364
 - ✗ 3. 380
 - ✗ 4. 354

Question ID : 264330102263
 Option 1 ID : 264330401517
 Option 2 ID : 264330401518
 Option 3 ID : 264330401519
 Option 4 ID : 264330401520
 Status : Answered
 Chosen Option : 1

Q.14 Select the option that is related to the third word in the same way as the second word is related to the first word.

(The words must be considered as meaningful English words and must not be related to each other based on the number of letters / number of consonants / vowels in the word)

Phycology : Algae :: Palaeontology : ?

Ans 1. Fossils

2. Insects

3. Plants

4. Fungi

Question ID : 26433082581

Option 1 ID : 264330324160

Option 2 ID : 264330324157

Option 3 ID : 264330324159

Option 4 ID : 264330324158

Status : Answered

Chosen Option : 4

Q.15 Select the option that represents the letters that, when sequentially placed from left to right in the blanks below, will complete the letter series.

HA__E__YNEHAY__H__NE

Ans 1. YHNENEAY

2. YHNAEAEY

3. YNHANEAY

4. YHNANEAY

Question ID : 26433092538

Option 1 ID : 264330363444

Option 2 ID : 264330363442

Option 3 ID : 264330363443

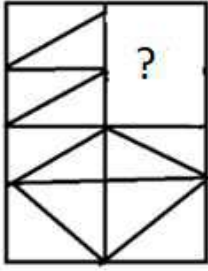
Option 4 ID : 264330363441

Status : Answered

Chosen Option : 3

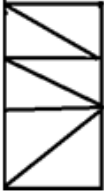
Adda247

Q.16 Select the option figure that will replace the question mark (?) in the figure given below to complete the pattern.



Ans

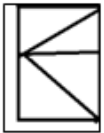
1.



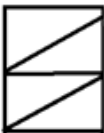
2.



3.



4.



Question ID : 264330118232

Option 1 ID : 264330464746

Option 2 ID : 264330464745

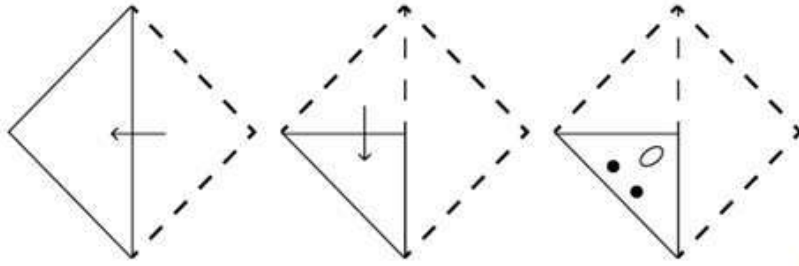
Option 3 ID : 264330464744

Option 4 ID : 264330464743

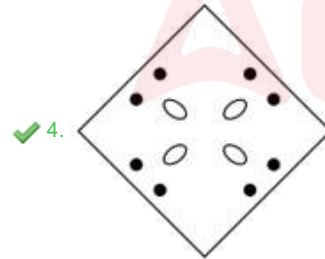
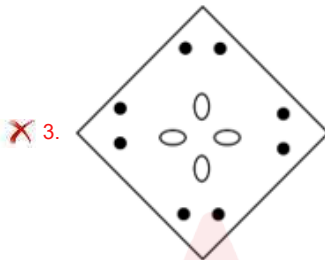
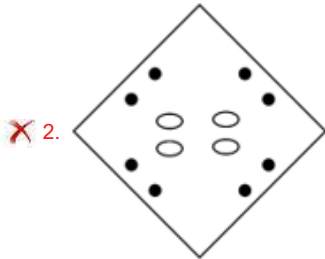
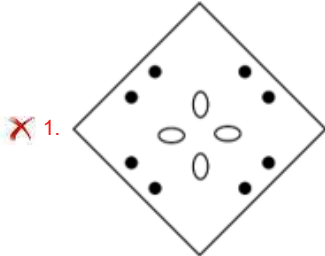
Status : Answered

Chosen Option : 2

Q.17 A square sheet of paper is folded along the dotted line successively along the directions shown and is then punched in the last. How would the paper look when unfolded?



Ans



Question ID : 264330172436

Option 1 ID : 264330676297

Option 2 ID : 264330676298

Option 3 ID : 264330676296

Option 4 ID : 264330676295

Status : Answered

Chosen Option : 4

Q.18 Select the correct combination of mathematical signs that can sequentially replace the * signs and balance the given equation.

$$7*10*5*6*4*15$$

- Ans
- 1. +, -, ×, +, =
 - 2. +, ×, -, +, =
 - 3. +, +, ×, -, =
 - 4. +, -, ×, +, =

Question ID : 26433079087

Option 1 ID : 264330310353

Option 2 ID : 264330310352

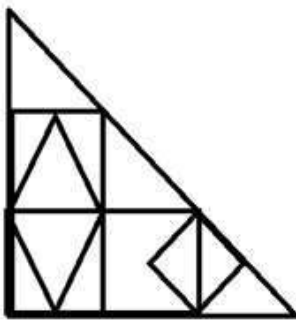
Option 3 ID : 264330310354

Option 4 ID : 264330310355

Status : Answered

Chosen Option : 3

Q.19 How many triangles are there in the given figure?



- Ans
- 1. 18
 - 2. 16
 - 3. 15
 - 4. 14

Question ID : 26433085412

Option 1 ID : 264330335349

Option 2 ID : 264330335352

Option 3 ID : 264330335351

Option 4 ID : 264330335350

Status : Answered

Chosen Option : 2

Q.20 Six students are sitting around a circular table facing the centre. Jasbir is an immediate neighbour of both Charan and Jagdish. Chetan is sitting second to the right of Jagdish. Palash is sitting third to the right of Charan. Pankaj is an immediate neighbour of both Charan and Chetan. Who is an immediate neighbour of both Jasbir and Palash?

- Ans
- 1. Charan
 - 2. Chetan
 - 3. Pankaj
 - 4. Jagdish

Question ID : 264330110714

Option 1 ID : 264330435133

Option 2 ID : 264330435136

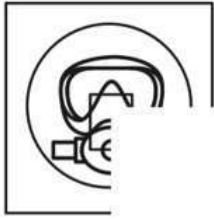
Option 3 ID : 264330435135

Option 4 ID : 264330435134

Status : Answered

Chosen Option : 4

Q.21 Which of the following option figures will complete the pattern in the figure given below?



Ans



Question ID : 26433080622

Option 1 ID : 264330316421

Option 2 ID : 264330316424

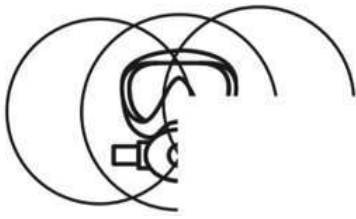
Option 3 ID : 264330316422

Option 4 ID : 264330316423

Status : Answered

Chosen Option : 3

Q.22 Which of the following option figures will complete the pattern in the figure given below?



Ans

✗ 1.



✗ 2.



✓ 3.



✗ 4.



Question ID : 26433080623

Option 1 ID : 264330316425

Option 2 ID : 264330316427

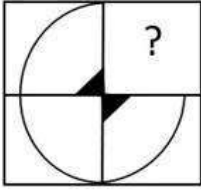
Option 3 ID : 264330316426

Option 4 ID : 264330316428

Status : Answered

Chosen Option : 3

Q.23 Select the option figure that will replace the question mark (?) in the figure given below to complete the pattern.



Ans

- ✓ 1.
- ✗ 2.
- ✗ 3.
- ✗ 4.

Question ID : 264330101320

Option 1 ID : 264330397826

Option 2 ID : 264330397827

Option 3 ID : 264330397825

Option 4 ID : 264330397828

Status : Answered

Chosen Option : 1

Q.24 Select the set in which the numbers are NOT related in the same way as are the numbers of the following sets.

(7, 245, 7), (8, 200, 5)

(NOTE: Operations should be performed on the whole numbers, without breaking down the numbers into its constituent digits.)

- Ans
- ✗ 1. (16, 560, 7)
 - ✗ 2. (6, 270, 9)
 - ✓ 3. (11, 396, 9)
 - ✗ 4. (12, 420, 7)

Question ID : 26433097241

Option 1 ID : 264330381664

Option 2 ID : 264330381662

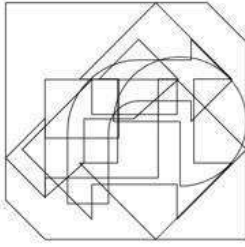
Option 3 ID : 264330381661

Option 4 ID : 264330381663

Status : Answered

Chosen Option : 3

Q.25 Select the option figure which is embedded in the given figure (Rotation is NOT allowed).



Ans

1.



2.



3.



4.



Question ID : 26433082016

Option 1 ID : 264330321897

Option 2 ID : 264330321898

Option 3 ID : 264330321899

Option 4 ID : 264330321900

Status : Answered

Chosen Option : 3

Section : Numerical Ability

Q.1 6 boys can complete a work in 18 hours. In how many hours will 16 boys complete the same work?

Ans

1. $3\frac{1}{4}$

2. $5\frac{3}{4}$

3. $6\frac{3}{4}$

4. $6\frac{1}{4}$

Question ID : 264330104537

Option 1 ID : 264330410451

Option 2 ID : 264330410450

Option 3 ID : 264330410449

Option 4 ID : 264330410452

Status : Answered

Chosen Option : 3

Q.2 What is the remainder obtained when a prime number greater than 7 is divided by 6?

Ans

1. 3 or 5

2. 1 or 5

3. 2 or 3

4. 2 or 5

Question ID : 264330104281

Option 1 ID : 264330409426

Option 2 ID : 264330409428

Option 3 ID : 264330409425

Option 4 ID : 264330409427

Status : Answered

Chosen Option : 2

Q.3 The monthly income of Amara is ₹80,200. If her income is decreased by 11%, then find her new monthly income (in ₹).

Ans

1. 71,250

2. 71,500

3. 71,820

4. 71,378

Question ID : 264330102324

Option 1 ID : 264330401762

Option 2 ID : 264330401761

Option 3 ID : 264330401764

Option 4 ID : 264330401763

Status : Answered

Chosen Option : 4

Q.4 On a certain sum of money, the difference between the compound interest for a year payable half-yearly, and the simple interest for a year is ₹729. If the rate of interest in both the cases is 6%, then the sum is:

- Ans
- 1. ₹8,50,000
 - 2. ₹7,90,000
 - 3. ₹8,10,000
 - 4. ₹8,30,000

Question ID : 264330103625
Option 1 ID : 264330406808
Option 2 ID : 264330406805
Option 3 ID : 264330406806
Option 4 ID : 264330406807
Status : Answered
Chosen Option : 3

Q.5 The number 0.0623 is how much less than $\frac{1}{16}$?

- Ans
- 1. $\frac{1}{500}$
 - 2. $\frac{1}{1500}$
 - 3. $\frac{1}{15000}$
 - 4. $\frac{1}{5000}$

Question ID : 264330111440
Option 1 ID : 264330437845
Option 2 ID : 264330437847
Option 3 ID : 264330437848
Option 4 ID : 264330437846
Status : Answered
Chosen Option : 4

Q.6 If the average of 5 consecutive even numbers is 70, then the largest even number is:

- Ans
- 1. 70
 - 2. 74
 - 3. 68
 - 4. 66

Question ID : 264330129388
Option 1 ID : 264330506920
Option 2 ID : 264330506921
Option 3 ID : 264330506919
Option 4 ID : 264330506918
Status : Answered
Chosen Option : 2

Q.7 Simplify.

$$0.7 \times 0.7 + 0.7 \div 7 + 7 \div 700$$

- Ans
- 1. 0.59
 - 2. 0.70
 - 3. 0.69
 - 4. 0.60

Question ID : 264330103920
Option 1 ID : 264330407981
Option 2 ID : 264330407984
Option 3 ID : 264330407982
Option 4 ID : 264330407983
Status : Answered
Chosen Option : 4

Q.8 The area of a triangle is 182 cm^2 and the length of one of its sides is 28 cm. What is the length of the perpendicular line segment drawn to this side of the triangle from the opposite vertex (in cm)?

- Ans
- 1. 6.5
 - 2. 13
 - 3. 14
 - 4. 12

Question ID : 264330112557
Option 1 ID : 264330442313
Option 2 ID : 264330442314
Option 3 ID : 264330442315
Option 4 ID : 264330442316
Status : Answered
Chosen Option : 2

Q.9 What number must be added to each term of ratio 3 : 5 so that it may equal to 5 : 6?

- Ans
- 1. 6
 - 2. 7
 - 3. 8
 - 4. 9

Question ID : 264330130934
Option 1 ID : 264330512850
Option 2 ID : 264330512849
Option 3 ID : 264330512847
Option 4 ID : 264330512848
Status : Answered
Chosen Option : 2

Q.10 The price of an article is first decreased by 25% and then increased by 35%. If the resulting price is ₹405, what was the original price of the article?

- Ans
- 1. ₹350
 - 2. ₹300
 - 3. ₹450
 - 4. ₹400

Question ID : 264330104285

Option 1 ID : 264330409443

Option 2 ID : 264330409441

Option 3 ID : 264330409444

Option 4 ID : 264330409442

Status : Answered

Chosen Option : 4

Q.11 The radii of the bases of two cylinders are in the ratio 3 : 7 and their heights are in the ratio 7 : 9. Find the ratio of their curved surface areas.

(Take $\pi = \frac{22}{7}$)

- Ans
- 1. 2 : 3
 - 2. 3 : 1
 - 3. 1 : 3
 - 4. 3 : 4

Question ID : 264330112440

Option 1 ID : 264330441845

Option 2 ID : 264330441847

Option 3 ID : 264330441846

Option 4 ID : 264330441848

Status : Answered

Chosen Option : 3

Q.12 A fruit seller sells $\left(\frac{2}{5}\right)$ part of the fruits at a profit of 15%, and remaining at a loss 5%. If the total profit is ₹1,800, then what is the total cost price of the fruits?

- Ans
- 1. ₹50,000
 - 2. ₹45,000
 - 3. ₹60,000
 - 4. ₹55,000

Question ID : 264330103612

Option 1 ID : 264330406755

Option 2 ID : 264330406756

Option 3 ID : 264330406753

Option 4 ID : 264330406754

Status : Answered

Chosen Option : 3

Q.13 A train travelling at a speed of 54 km/h catches another train travelling in the same direction and then leaves it 70 m behind in 14 seconds. The speed of the second train is:

- Ans 1. 54 km/h
 2. 36 km/h
 3. 24 km/h
 4. 48 km/h

Question ID : 264330104420
Option 1 ID : 264330409984
Option 2 ID : 264330409982
Option 3 ID : 264330409981
Option 4 ID : 264330409983
Status : Answered
Chosen Option : 2

Q.14 The annual instalment of ₹750 in 5 years at 5% per annum simple interest will discharge a debt of _____.

- Ans 1. ₹4,025
 2. ₹4,215
 3. ₹3,937.5
 4. ₹4,125

Question ID : 264330120028
Option 1 ID : 264330470370
Option 2 ID : 264330470367
Option 3 ID : 264330470368
Option 4 ID : 264330470369
Status : Answered
Chosen Option : 3

Q.15 The marked price of a commodity was ₹2,875. The seller offered a discount of 8% on its sale and still made a profit of 15%. What was the cost price (in ₹) of the commodity?

- Ans 1. 2248.25
 2. 2375
 3. 2275.75
 4. 2300

Question ID : 264330112541
Option 1 ID : 264330442252
Option 2 ID : 264330442250
Option 3 ID : 264330442249
Option 4 ID : 264330442251
Status : Answered
Chosen Option : 4

Q.1 Which folder in an email client is used to store received emails?

- Ans 1. Inbox
 2. Sent Items
 3. Drafts
 4. Outbox

Question ID : 264330174464
Option 1 ID : 264330684275
Option 2 ID : 264330684278
Option 3 ID : 264330684277
Option 4 ID : 264330684276
Status : Answered
Chosen Option : 1

Q.2 What is the primary function of FTP (File Transfer Protocol)?

- Ans 1. Video streaming
 2. Browsing websites
 3. Transferring files between computers
 4. Sending emails

Question ID : 264330180672
Option 1 ID : 264330708658
Option 2 ID : 264330708656
Option 3 ID : 264330708657
Option 4 ID : 264330708655
Status : Answered
Chosen Option : 3

Q.3 Which of the following options is NOT used to set page margins in MS Word 365?

- Ans 1. Left
 2. Header
 3. Bottom
 4. Right

Question ID : 264330178579
Option 1 ID : 264330700344
Option 2 ID : 264330700346
Option 3 ID : 264330700343
Option 4 ID : 264330700345
Status : Answered
Chosen Option : 2

Q.4 In MS Excel 365, to enable the edit mode in MS-Excel worksheet, we should follow:

- Ans 1. File > Advanced > Editing options > Options
 2. File > Options > Editing options
 3. File > Options > Advanced > Editing options
 4. File > Advanced > Editing options

Question ID : 264330175964
Option 1 ID : 264330690152
Option 2 ID : 264330690154
Option 3 ID : 264330690151
Option 4 ID : 264330690153
Status : Answered
Chosen Option : 3

Q.5 In MS-word 365, the keyboard shortcut Shift + F3 can be used to change the text document as:

- Ans
- 1. Capitalize Each Word
 - 2. Size of Font
 - 3. Bold Font
 - 4. Highlight Text color

Question ID : 264330175983
Option 1 ID : 264330690229
Option 2 ID : 264330690228
Option 3 ID : 264330690227
Option 4 ID : 264330690230
Status : Answered
Chosen Option : 3

Q.6 In MS Excel 365, which of the following functions can be used to display the formula applied to a specific cell?

- Ans
- 1. =RETFORMULA(Cell_Reference)
 - 2. =FORMULATEXT(Cell_Reference)
 - 3. =CALLFORMULA(Cell_Reference)
 - 4. =TEXTFORMULA(Cell_Reference)

Question ID : 264330182052
Option 1 ID : 264330714049
Option 2 ID : 264330714050
Option 3 ID : 264330714048
Option 4 ID : 264330714047
Status : Answered
Chosen Option : 4

Q.7 Which operation can be used to move the text in a document of MS word 365?

- Ans
- 1. Cut-paste
 - 2. Cut-copy-paste
 - 3. Move-paste
 - 4. Copy-paste

Question ID : 264330175968
Option 1 ID : 264330690168
Option 2 ID : 264330690170
Option 3 ID : 264330690167
Option 4 ID : 264330690169
Status : Answered
Chosen Option : 1

Q.8 In Microsoft Excel 365, which of the following keyboard shortcuts enables you to save a workbook?

- Ans
- 1. Ctrl + A
 - 2. Ctrl + S
 - 3. Ctrl + G
 - 4. Ctrl + F

Question ID : 264330182050
Option 1 ID : 264330714040
Option 2 ID : 264330714039
Option 3 ID : 264330714041
Option 4 ID : 264330714042
Status : Answered
Chosen Option : 2

Q.9 What does the menu bar do in MS-Word 365?

- Ans**
- 1. Finds program essential functions
 - 2. Displays the title of the software
 - 3. It moves the window moving area upside
 - 4. Displays the current page number of the document

Question ID : 264330171418
Option 1 ID : 264330672287
Option 2 ID : 264330672288
Option 3 ID : 264330672290
Option 4 ID : 264330672289
Status : Answered
Chosen Option : 1

Q.10 What is the shortcut key for closing the documents in MS-Word 365?

- Ans**
- 1. Ctrl + C
 - 2. Ctrl + W
 - 3. Ctrl + Alt + S
 - 4. Ctrl + B

Question ID : 264330171415
Option 1 ID : 264330672275
Option 2 ID : 264330672277
Option 3 ID : 264330672276
Option 4 ID : 264330672278
Status : Answered
Chosen Option : 1

Adda247

Constable Executive Male and Female in Delhi Police Examination 2023

Roll Number	
Candidate Name	
Venue Name	ION Digital Zone Phulwarisharif
Exam Date	29/11/2023
Exam Time	3:00 PM - 4:30 PM
Subject	Constable Executive Male and Female in Delhi Police Examination 2023

Section : General Knowledge

Q.1 अल्लाह रक्खा, साबिर खान, पंडित किशन महाराज, पंडित ज्ञान प्रकाश घोष और संदीप दास निम्नलिखित में से किस वाद्य यंत्र के प्रसिद्ध वादक हैं?

- Ans
- 1. तबला
 - 2. मृदंगम
 - 3. पखवाज
 - 4. घटम

Question ID : 264330144043
Option 1 ID : 264330564435
Option 2 ID : 264330564437
Option 3 ID : 264330564436
Option 4 ID : 264330564438
Status : Answered
Chosen Option : 2

Q.2 राष्ट्रीय आय लेखांकन की किस पद्धति में उत्पादन केंद्रों को प्राथमिक, द्वितीयक और तृतीयक क्षेत्रों में वर्गीकृत करना शामिल है?

- Ans
- 1. अवशिष्ट उपागम
 - 2. उत्पादन उपागम
 - 3. आय उपागम
 - 4. व्यय उपागम

Question ID : 264330112469
Option 1 ID : 264330441964
Option 2 ID : 264330441961
Option 3 ID : 264330441962
Option 4 ID : 264330441963
Status : Answered
Chosen Option : 2

Q.3 Which Indian state has the world's longest highway tunnel (as of July 2023)?

- Ans
- 1. West Bengal
 - 2. Himachal Pradesh
 - 3. Gujarat
 - 4. Rajasthan

Question ID : 264330182957
Option 1 ID : 264330717561
Option 2 ID : 264330717560
Option 3 ID : 264330717563
Option 4 ID : 264330717562
Status : Answered
Chosen Option : 2

Q.4 निम्नलिखित में से कौन 1867 में स्थापित एक सुधारवादी समाज 'प्रार्थना समाज' से संबंधित नहीं है?

- Ans 1. बाल गंगाधर तिलक
 2. आर. जी. भंडारकर
 3. गोविन्द रानाडे
 4. आत्माराम पांडुरंग

Question ID : 264330130561
Option 1 ID : 264330511355
Option 2 ID : 264330511356
Option 3 ID : 264330511357
Option 4 ID : 264330511358
Status : Answered
Chosen Option : 4

Q.5 According to Census 2011, which union territory has the highest male literacy rate?

- Ans 1. Delhi
 2. Daman & Diu
 3. Lakshadweep
 4. Puducherry

Question ID : 264330132748
Option 1 ID : 264330520089
Option 2 ID : 264330520088
Option 3 ID : 264330520087
Option 4 ID : 264330520090
Status : Answered
Chosen Option : 3

Q.6 Which of the following Schedules of the Constitution of India have immunity from Judicial Review?

- Ans 1. 4th
 2. 6th
 3. 10th
 4. 9th

Question ID : 264330130477
Option 1 ID : 264330511022
Option 2 ID : 264330511019
Option 3 ID : 264330511021
Option 4 ID : 264330511020
Status : Answered
Chosen Option : 4

Q.7 The Mahabodhi Temple is in which of these states?

- Ans 1. Uttar Pradesh
 2. Bihar
 3. Chhattisgarh
 4. Madhya Pradesh

Question ID : 264330109315
Option 1 ID : 264330429539
Option 2 ID : 264330429540
Option 3 ID : 264330429537
Option 4 ID : 264330429538
Status : Answered
Chosen Option : 2

Q.8 Which of the following statements about cell is correct?

- Ans
- 1. Bacterial cell contains cellulose.
 - 2. Powerhouse of a cell is plastid.
 - 3. Cell is a functional unit of life.
 - 4. Cell membrane of a cell is hard and rigid.

Question ID : 264330120944
Option 1 ID : 264330473992
Option 2 ID : 264330473993
Option 3 ID : 264330473994
Option 4 ID : 264330473991
Status : Answered
Chosen Option : 3

Q.9 Which of the following is an example of double displacement reaction?

- Ans
- 1. $2\text{Pb}(\text{NO}_3)_2 (\text{s}) + \text{Heat} \rightarrow 2\text{PbO} (\text{s}) + 4\text{NO}_2 (\text{g}) + \text{O}_2 (\text{g})$
 - 2. $\text{ZnO} + \text{C} \rightarrow \text{Zn} + \text{CO}$
 - 3. $\text{Fe}(\text{s}) + \text{CuSO}_4 (\text{aq}) \rightarrow \text{FeSO}_4 (\text{aq}) + \text{Cu} (\text{s})$
 - 4. $\text{Na}_2\text{SO}_4 (\text{aq}) + \text{BaCl}_2 (\text{aq}) \rightarrow \text{BaSO}_4 (\text{s}) + 2\text{NaCl} (\text{aq})$

Question ID : 264330182936
Option 1 ID : 264330717479
Option 2 ID : 264330717478
Option 3 ID : 264330717476
Option 4 ID : 264330717477
Status : Answered
Chosen Option : 4

Q.10 Which part of our body is responsible for digestion?

- Ans
- 1. Kidney
 - 2. Hands
 - 3. Gastric glands
 - 4. Heart

Question ID : 264330118271
Option 1 ID : 264330464901
Option 2 ID : 264330464899
Option 3 ID : 264330464900
Option 4 ID : 264330464902
Status : Answered
Chosen Option : 3

Q.11 Which of the following is the darkest, or least reflective object in the Solar System with an albedo of 0.03?

- Ans
- 1. 9P/Tempel 1
 - 2. 2P/Encke
 - 3. 1P/Halley
 - 4. 19P/Borrelly

Question ID : 264330114167
Option 1 ID : 264330448755
Option 2 ID : 264330448754
Option 3 ID : 264330448756
Option 4 ID : 264330448753
Status : Not Answered
Chosen Option : --

Q.12 The voting age was reduced from 21 years to 18 years by the _____ Constitutional Amendment Act of 1988.

- Ans
- 1. 51st
 - 2. 61st
 - 3. 71st
 - 4. 41st

Question ID : 264330130432
Option 1 ID : 264330510840
Option 2 ID : 264330510841
Option 3 ID : 264330510842
Option 4 ID : 264330510839
Status : Answered
Chosen Option : 3

Q.13 Which of the following players won the Major Dhyan Chand Khel Ratna Award in Hockey in 2021?

- Ans
- 1. PR Sreejesh
 - 2. Lovlina Borgohain
 - 3. Sumit Antil
 - 4. Ravi Kumar Dahiya

Question ID : 264330176744
Option 1 ID : 264330693193
Option 2 ID : 264330693191
Option 3 ID : 264330693194
Option 4 ID : 264330693192
Status : Not Answered
Chosen Option : --

Q.14 निम्नलिखित में से कौन-सा युग्म गलत है?

- Ans
- 1. चौथी पंचवर्षीय योजना-गरीबी हटाओ लक्ष्य
 - 2. प्रथम पंचवर्षीय योजना - कृषि विकास
 - 3. दूसरी पंचवर्षीय योजना - नेहरू महालनोबिस मॉडल
 - 4. तीसरी पंचवर्षीय योजना - गाडगिल योजना

Question ID : 264330131566
Option 1 ID : 264330515370
Option 2 ID : 264330515367
Option 3 ID : 264330515368
Option 4 ID : 264330515369
Status : Answered
Chosen Option : 3

Q.15 इलाहाबाद के स्तम्भ पर हरिषेण द्वारा लिखित अभिलेख किस भाषा में है?

- Ans
- 1. फ़ारसी
 - 2. संस्कृत
 - 3. प्राकृत
 - 4. पाली

Question ID : 264330130541
Option 1 ID : 264330511277
Option 2 ID : 264330511275
Option 3 ID : 264330511276
Option 4 ID : 264330511278
Status : Answered
Chosen Option : 3

Q.16 What percentage of people were below the poverty line in India in 2011-2012 as per the Economic Survey 2013-14, released by the Ministry of Finance, Government of India?

- Ans
- 1. 12.4%
 - 2. 21.9%
 - 3. 10.2%
 - 4. 18.7%

Question ID : 264330179282
Option 1 ID : 264330703132
Option 2 ID : 264330703134
Option 3 ID : 264330703131
Option 4 ID : 264330703133
Status : Answered
Chosen Option : 2

Q.17 निम्नलिखित में से वह कौन तुर्की शासक था जिसने 1398 में लूट के इरादे से भारत पर आक्रमण किया था?

- Ans
- 1. शाहरुख मिर्ज़ा
 - 2. तैमूर लंग
 - 3. चंगेज़ खान
 - 4. गुयुक खान

Question ID : 264330182710
Option 1 ID : 264330716613
Option 2 ID : 264330716614
Option 3 ID : 264330716612
Option 4 ID : 264330716611
Status : Answered
Chosen Option : 2

Q.18 निम्नलिखित में से कौन-सा विकल्प, पृथ्वी के अंतरंग का कोई भाग है?

- Ans
- 1. समताप मंडल
 - 2. दुर्बलता मंडल
 - 3. ताप मंडल
 - 4. क्षोभ मंडल

Question ID : 264330131740
Option 1 ID : 264330516060
Option 2 ID : 264330516062
Option 3 ID : 264330516061
Option 4 ID : 264330516059
Status : Answered
Chosen Option : 4

Q.19 In the context of external debt, what do ECBs stands for?

- Ans
- 1. Essential Commercial Borrowings
 - 2. Essential Common Borrowings
 - 3. External Commercial Borrowings
 - 4. External Common Borrowings

Question ID : 264330109395
Option 1 ID : 264330429858
Option 2 ID : 264330429857
Option 3 ID : 264330429860
Option 4 ID : 264330429859
Status : Answered
Chosen Option : 3

Q.20 Srimanta Sankar Dev is associated with which of these dance forms?

- Ans
- 1. Odissi
 - 2. Manipuri
 - 3. Sattriya
 - 4. Kathak

Question ID : 264330109302
Option 1 ID : 264330429486
Option 2 ID : 264330429488
Option 3 ID : 264330429487
Option 4 ID : 264330429485
Status : Answered
Chosen Option : 1

Q.21 _____ का उद्देश्य, शेल्टर फॉर अर्बन होमलेस (SUH) योजना के तहत चरणबद्ध तरीके से शहरी बेघरों को आवश्यक सेवाओं सहित स्थायी आवास प्रदान करना है।

- Ans
- 1. ग्रामीण आवास योजना
 - 2. राजीव आवास योजना
 - 3. प्रधानमंत्री आवास योजना
 - 4. राष्ट्रीय शहरी आजीविका मिशन (NULM)

Question ID : 264330182975
Option 1 ID : 264330717634
Option 2 ID : 264330717632
Option 3 ID : 264330717635
Option 4 ID : 264330717633
Status : Answered
Chosen Option : 3

Q.22 भारतीय भूवैज्ञानिक सर्वेक्षण (GSI) की स्थापना 1851 में मुख्य रूप से _____ के लिए कोयला भंडार खोजने हेतु की गई थी।

- Ans
- 1. जापान को निर्यात करने
 - 2. समुद्री परिवहन
 - 3. रेलवे
 - 4. कपड़ा मील

Question ID : 264330181231
Option 1 ID : 264330710847
Option 2 ID : 264330710848
Option 3 ID : 264330710850
Option 4 ID : 264330710849
Status : Answered
Chosen Option : 3

Q.23 मयूर सिंहासन के नाम से मशहूर रत्न जड़ित सिंहासन को _____ द्वारा साधिकार किया गया था।

- Ans
- 1. औरंगजेब
 - 2. हुमायूँ
 - 3. अकबर
 - 4. शाहजहाँ

Question ID : 264330114844
Option 1 ID : 264330451464
Option 2 ID : 264330451461
Option 3 ID : 264330451462
Option 4 ID : 264330451463
Status : Answered
Chosen Option : 4

Q.24 निम्नलिखित में से कौन-सी नीति निजीकरण को बढ़ावा देती है?

- A. विनिवेश
- B. आउटसोर्सिंग
- C. शहरीकरण

Ans 1. केवल A और B

- 2. A और C दोनों
- 3. सभी – A, B और C
- 4. केवल A

Question ID : 264330109136

Option 1 ID : 264330428822

Option 2 ID : 264330428821

Option 3 ID : 264330428824

Option 4 ID : 264330428823

Status : Answered

Chosen Option : 2

Q.25 भारतीय संविधान के किस अनुच्छेद में उल्लेख है कि कलात्मक या ऐतिहासिक रुचि के प्रत्येक स्मारक या स्थान या वस्तु की रक्षा करना राज्य का दायित्व होगा?

Ans 1. अनुच्छेद 51

2. अनुच्छेद 47

3. अनुच्छेद 45

4. अनुच्छेद 49

Question ID : 264330183152

Option 1 ID : 264330718343

Option 2 ID : 264330718341

Option 3 ID : 264330718340

Option 4 ID : 264330718342

Status : Answered

Chosen Option : 1

Q.26 भारत के संविधान में निम्नलिखित में से कौन-सी विशेषता भारत सरकार अधिनियम, 1935 से ली गई है?

Ans 1. आपातकाल के दौरान मौलिक अधिकारों का निलंबन

2. संघीय योजना

3. संसद के दोनों सदनों की संयुक्त बैठक

4. गणतंत्र की कल्पना

Question ID : 264330133047

Option 1 ID : 264330521241

Option 2 ID : 264330521240

Option 3 ID : 264330521242

Option 4 ID : 264330521239

Status : Answered

Chosen Option : 2

Q.27 Under the LERMS system, what percentage of foreign exchange earnings can be converted at the official rate?

- Ans 1. 35
 2. 40
 3. 25
 4. 20

Question ID : 264330109419
Option 1 ID : 264330429955
Option 2 ID : 264330429956
Option 3 ID : 264330429954
Option 4 ID : 264330429953
Status : Not Answered
Chosen Option : --

Q.28 निम्नलिखित में से किस खिलाड़ी का संबंध तलवारबाजी (fencing) से है?

- Ans 1. सी.ए. भवानी देवी
 2. नवजीत कौर दिल्ली
 3. पारुल चौधरी
 4. हिमा दास

Question ID : 264330118893
Option 1 ID : 264330466227
Option 2 ID : 264330466230
Option 3 ID : 264330466228
Option 4 ID : 264330466229
Status : Not Answered
Chosen Option : --

Q.29 In which of the following years was the Telangana Legislative Assembly established?

- Ans 1. 2012
 2. 2013
 3. 2014
 4. 2010

Question ID : 26433086857
Option 1 ID : 264330341070
Option 2 ID : 264330341071
Option 3 ID : 264330341072
Option 4 ID : 264330341069
Status : Answered
Chosen Option : 3

Q.30 In a cricket match, the number of balls in an over is _____ .

- Ans 1. 5
 2. 7
 3. 6
 4. 8

Question ID : 264330132558
Option 1 ID : 264330519327
Option 2 ID : 264330519329
Option 3 ID : 264330519328
Option 4 ID : 264330519330
Status : Answered
Chosen Option : 3

Q.31 Which of the following Indian states is known for its extensive tea plantations?

- Ans 1. Rajasthan
 2. Assam
 3. Punjab
 4. Gujarat

Question ID : 264330183057
Option 1 ID : 264330717962
Option 2 ID : 264330717963
Option 3 ID : 264330717960
Option 4 ID : 264330717961
Status : Answered
Chosen Option : 2

Q.32 जब एक कोशिका विभाजित नहीं हो रही होती है, तो उसके नाभिक में अत्यधिक विस्तारित और विस्तृत न्यूक्लियो प्रोटीन तंतु होते हैं। इसे क्या कहते हैं?

- Ans 1. फाइब्रोमैटिन
 2. ब्रोमैटिन
 3. क्रोमैटिन
 4. ट्युबुलिन

Question ID : 264330134881
Option 1 ID : 264330528462
Option 2 ID : 264330528460
Option 3 ID : 264330528461
Option 4 ID : 264330528459
Status : Answered
Chosen Option : 1

Q.33 भारतीय संविधान के किस अनुच्छेद में यह उल्लेख है कि 'मंत्रियों द्वारा राज्यपाल को दी गई सलाह की किसी भी न्यायालय में जांच नहीं की जाएगी'?

- Ans 1. अनुच्छेद 167
 2. अनुच्छेद 161
 3. अनुच्छेद 168
 4. अनुच्छेद 163

Question ID : 264330178908
Option 1 ID : 264330701637
Option 2 ID : 264330701636
Option 3 ID : 264330701638
Option 4 ID : 264330701635
Status : Answered
Chosen Option : 1

Q.34 With which Indian classical dance form is Sujata Mohapatra associated?

- Ans 1. Bharatanatyam
 2. Odissi
 3. Sattriya
 4. Kathak

Question ID : 264330132402
Option 1 ID : 264330518705
Option 2 ID : 264330518704
Option 3 ID : 264330518703
Option 4 ID : 264330518706
Status : Answered
Chosen Option : 2

Q.35 Karaikudi R Mani is India's renowned player of the _____.

- Ans
- 1. santoor
 - 2. mridangam
 - 3. violin
 - 4. sitar

Question ID : 264330113241
Option 1 ID : 264330445051
Option 2 ID : 264330445052
Option 3 ID : 264330445050
Option 4 ID : 264330445049
Status : Not Answered
Chosen Option : --

Q.36 Makar Dhwaja Darogha was honoured with the Padma Shri for which form of dance?

- Ans
- 1. Chhau
 - 2. Kalbelia
 - 3. Mohiniattam
 - 4. Kathak

Question ID : 26433074885
Option 1 ID : 264330293630
Option 2 ID : 264330293629
Option 3 ID : 264330293631
Option 4 ID : 264330293628
Status : Not Answered
Chosen Option : --

Q.37 Cricketer Ravi Shastri represented the _____ team in the Ranji Trophy tournament.

- Ans
- 1. Calcutta
 - 2. Karnataka
 - 3. Delhi
 - 4. Mumbai

Question ID : 264330118477
Option 1 ID : 264330465312
Option 2 ID : 264330465310
Option 3 ID : 264330465309
Option 4 ID : 264330465311
Status : Answered
Chosen Option : 4

Q.38 निजीकरण के अर्थ के संबंध में निम्नलिखित कथनों पर विचार करें।

- (i) सार्वजनिक क्षेत्र के उद्यमों के स्वामित्व का हस्तांतरण निजी क्षेत्र के उद्यमियों को न करना।
(ii) सार्वजनिक क्षेत्र के उद्यमों के प्रबंधन का हस्तांतरण निजी क्षेत्र के उद्यमियों को करना।
सही उत्तर का चयन करें।

- Ans 1. केवल (i) सत्य है
 2. (i) और (ii) दोनों असत्य हैं
 3. (i) और (ii) दोनों सत्य हैं
 4. केवल (ii) सत्य है

Question ID : 264330116557

Option 1 ID : 264330458313

Option 2 ID : 264330458316

Option 3 ID : 264330458315

Option 4 ID : 264330458314

Status : Answered

Chosen Option : 4

Q.39 श्यामजी कृष्णवर्मा ने किस स्थान पर इंडिया होम रूल (India Home Rule) सोसाइटी की स्थापना की, जिसे इंडिया हाउस फॉर इंडियाज लिबरेशन (India House for India's liberation) के नाम से जाना जाता है?

- Ans 1. बर्लिन
 2. सैन-फ्रैन्सिस्को
 3. लंदन
 4. पेरिस

Question ID : 264330120302

Option 1 ID : 264330471462

Option 2 ID : 264330471461

Option 3 ID : 264330471460

Option 4 ID : 264330471459

Status : Answered

Chosen Option : 1

Q.40 Which liberal Viceroy enacted local self-government for municipalities and repealed the unpopular Vernacular Press Act of 1878?

- Ans 1. Lord Ripon
 2. Lord Ilbert
 3. Lord Dufferin
 4. Lord Lytton

Question ID : 264330120151

Option 1 ID : 264330470860

Option 2 ID : 264330470859

Option 3 ID : 264330470862

Option 4 ID : 264330470861

Status : Answered

Chosen Option : 1

Q.41 एलोरा का कैलाश मंदिर और महाबलीपुरम का रथ मंदिर किस प्रकार की मंदिर वास्तुकला के उदाहरण हैं?

- Ans
- 1. विशालकाय
 - 2. पंचायतन
 - 3. निम्न आधार
 - 4. रॉक-कट

Question ID : 264330111853
Option 1 ID : 264330439497
Option 2 ID : 264330439500
Option 3 ID : 264330439499
Option 4 ID : 264330439498
Status : Answered
Chosen Option : 4

Q.42 वेम्पति चिन्ना सत्यम ने किस प्रकार के नृत्य के लिए वर्ष 1998 में पद्म भूषण प्राप्त किया था?

- Ans
- 1. कथक
 - 2. कुचिपुड़ी
 - 3. कथकली
 - 4. भरतनाट्यम

Question ID : 26433074874
Option 1 ID : 264330293585
Option 2 ID : 264330293586
Option 3 ID : 264330293587
Option 4 ID : 264330293584
Status : Answered
Chosen Option : 3

Q.43 निम्नलिखित में से किस संविधान संशोधन अधिनियम में यह प्रावधान किया गया है कि सभी नागरिकों को सहकारी समितियाँ गठित करने का मौलिक अधिकार होगा?

- Ans
- 1. 89वां संशोधन अधिनियम
 - 2. 99वां संशोधन अधिनियम
 - 3. 91वां संशोधन अधिनियम
 - 4. 97वां संशोधन अधिनियम

Question ID : 264330180868
Option 1 ID : 264330709438
Option 2 ID : 264330709436
Option 3 ID : 264330709437
Option 4 ID : 264330709435
Status : Not Answered
Chosen Option : --

Q.44 After MK Gandhi's returning to India in 1915, who among the following advised him to travel around India to know the land and its people?

- Ans 1. Gopal Krishna Gokhale
 2. Chittaranjan Das
 3. Bipin Chandra Pal
 4. Bal Gangadhar Tilak

Question ID : 264330119018

Option 1 ID : 264330466730

Option 2 ID : 264330466729

Option 3 ID : 264330466727

Option 4 ID : 264330466728

Status : Answered

Chosen Option : 1

Q.45 गुप्त काल में कालिदास द्वारा लिखित राजा दुष्यंत की प्रेम कहानी पर आधारित नाटक निम्नलिखित में से कौन-सा था?

- Ans 1. रघुवंशम्
 2. विक्रमोर्वशी
 3. कुमारसंभव
 4. अभिज्ञानशाकुंतल

Question ID : 264330120241

Option 1 ID : 264330471221

Option 2 ID : 264330471219

Option 3 ID : 264330471220

Option 4 ID : 264330471222

Status : Answered

Chosen Option : 3

Q.46 पूर्वोत्तर भारत में, अहोम इस त्योहार को हर साल 31 जनवरी को सभी पारंपरिक वेशभूषा और धूमधाम से अपने पूर्वजों की पूजा करने के लिए एक आम जगह पर मनाते हैं। त्योहार की पहचान करें।

- Ans 1. डोलजात्रा
 2. जोनबील मेला
 3. रोंगकर
 4. मे दम मे फी

Question ID : 264330141779

Option 1 ID : 264330555437

Option 2 ID : 264330555438

Option 3 ID : 264330555435

Option 4 ID : 264330555436

Status : Not Answered

Chosen Option : --

Q.47 भारत के पूर्व प्रधानमंत्रियों में से एक, आई.के. गुजराल ने निम्नलिखित में से कौन-सी आत्मकथा लिखी है?

- Ans
- 1. फ्रॉम कॉरिडोर ऑफ पॉवर
 - 2. मैटर्स ऑफ डिस्क्रिशन
 - 3. माई टाइम्स
 - 4. लिविंग हिस्ट्री

Question ID : 26433055362
Option 1 ID : 264330216435
Option 2 ID : 264330216432
Option 3 ID : 264330216433
Option 4 ID : 264330216434
Status : Not Answered
Chosen Option : --

Q.48 Who is the writer of the famous autobiography 'The Story of My Life'?

- Ans
- 1. Helen Keller
 - 2. Steve Jobs
 - 3. Anne Frank
 - 4. Mahatma Gandhi

Question ID : 26433071468
Option 1 ID : 264330280297
Option 2 ID : 264330280299
Option 3 ID : 264330280296
Option 4 ID : 264330280298
Status : Answered
Chosen Option : 3

Q.49 मुद्रा आपूर्ति के निम्नलिखित उपायों में से किस उपाय को 'समाज के कुल मौद्रिक संसाधनों' के रूप में भी जाना जाता है?

- Ans
- 1. M1
 - 2. M4
 - 3. M2
 - 4. M3

Question ID : 264330116502
Option 1 ID : 264330458093
Option 2 ID : 264330458096
Option 3 ID : 264330458094
Option 4 ID : 264330458095
Status : Not Answered
Chosen Option : --

Q.50 Bihu festival is majorly celebrated in which of these states?

- Ans
- 1. Goa
 - 2. Maharashtra
 - 3. Assam
 - 4. Kerala

Question ID : 264330109307
Option 1 ID : 264330429505
Option 2 ID : 264330429506
Option 3 ID : 264330429508
Option 4 ID : 264330429507
Status : Answered
Chosen Option : 3

Q.1 Select the set in which the numbers are related in the same way as are the numbers of the following sets.

(NOTE: Operations should be performed on the whole numbers, without breaking down the numbers into its constituent digits. E.g., 13 – Operations on 13 such as adding/deleting/multiplying etc. to 13 can be performed. Breaking down 13 into 1 and 3 and then performing mathematical operations on 1 and 3 is not allowed)
(13, 5, 87)
(17, 6, 115)

- Ans 1. (21, 7, 153)
 2. (9, 4, 6)
 3. (29, 9, 207)
 4. (25, 8, 171)

Question ID : 26433052103

Option 1 ID : 264330203716

Option 2 ID : 264330203714

Option 3 ID : 264330203717

Option 4 ID : 264330203715

Status : Answered

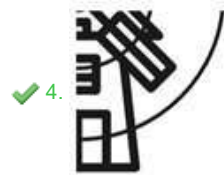
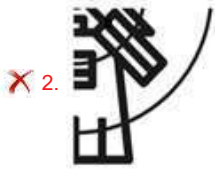
Chosen Option : 4



Q.2 Which of the following option figures will complete the pattern in the figure given below?



Ans



Question ID : 26433080606

Option 1 ID : 264330316358

Option 2 ID : 264330316357

Option 3 ID : 264330316360

Option 4 ID : 264330316359

Status : Answered

Chosen Option : 4

Q.3 Select the correct mirror image of the given combination when the mirror is placed at MN as shown below.

F c 7 q 4 k n



Ans

- 1. u k 4 b 7 c F
- 2. F c 7 p 4 k n
- 3. F c d 7 4 k n
- 4. F c 7 d 4 k n

Question ID : 264330116999

Option 1 ID : 264330460077

Option 2 ID : 264330460080

Option 3 ID : 264330460079

Option 4 ID : 264330460078

Status : Answered

Chosen Option : 4

Q.4 Select the correct combination of mathematical signs to sequentially replace the * signs and to balance the given equation.
 $65 * 81 * 9 * 10 * 8 * 8$

Ans

- 1. + + - x =
- 2. + + - x =
- 3. + + - = x
- 4. + - + x =

Question ID : 26433085716

Option 1 ID : 264330336565

Option 2 ID : 264330336568

Option 3 ID : 264330336566

Option 4 ID : 264330336567

Status : Answered

Chosen Option : 3

Q.5 Which figure should replace the question mark (?) if the series were to be continued?

S	2	T	S	
△ X 2	O S X	E 2 S	△ T 2	?
P O	△ P	O △	E O	

Ans

1.

2		
O 7 T		
↑ △		

2.

7		
↑ E T		
O 2		

3.

7		
↑ S T		
△ E		

4.

2		
O S T		
△ E		

Question ID : 264330130816

Option 1 ID : 264330512377

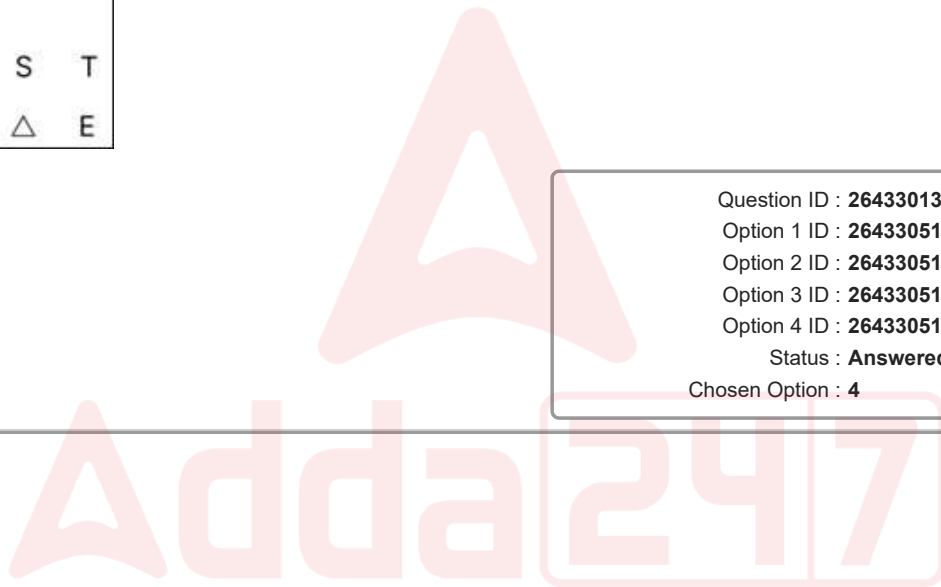
Option 2 ID : 264330512378

Option 3 ID : 264330512376

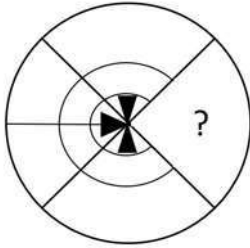
Option 4 ID : 264330512375

Status : Answered

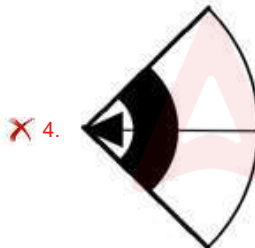
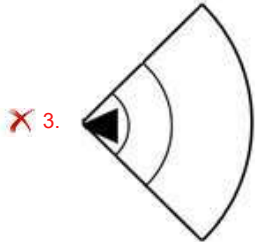
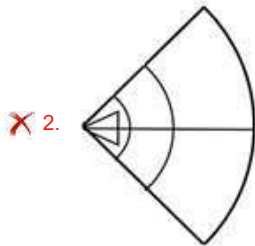
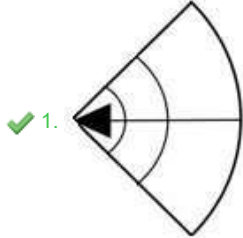
Chosen Option : 4



Q.6 Select the figure from the options that can replace the question mark (?) and complete the given pattern.



Ans



Question ID : 26433082914

Option 1 ID : 264330325492

Option 2 ID : 264330325489

Option 3 ID : 264330325491

Option 4 ID : 264330325490

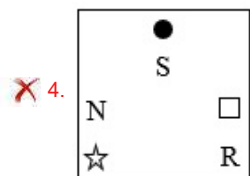
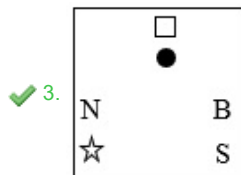
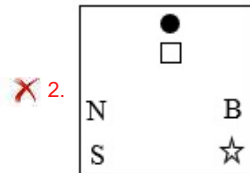
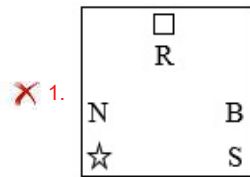
Status : Answered

Chosen Option : 1

Q.7 Select the figure from among the given options that can replace the question mark (?) in the following series.

T R	□ E	V ☆	B R	
N E	V S	N R	□ S	□ S
			N ☆	?

Ans



Question ID : 26433090949

Option 1 ID : 264330357208

Option 2 ID : 264330357207

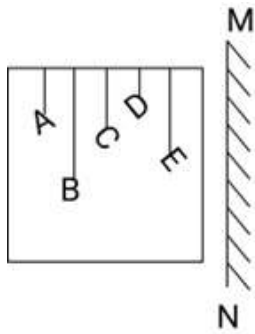
Option 3 ID : 264330357206

Option 4 ID : 264330357205

Status : Answered

Chosen Option : 4

Q.8 Select the correct mirror image of the given combination when the mirror is placed at 'MN' as shown below.



Ans

- ✗ 1.
- ✓ 2.
- ✗ 3.
- ✗ 4.

Question ID : 264330130764

Option 1 ID : 264330512168

Option 2 ID : 264330512170

Option 3 ID : 264330512167

Option 4 ID : 264330512169

Status : Answered

Chosen Option : 2

Q.9 Select the option that represents the letters that, when sequentially placed from left to right in the blanks below, will complete the letter series.

D _ P _ U D N _ T _ _ P T U D _ _ T U

- ✗ 1. TNUPDNNP
- ✗ 2. NTUPNDPN
- ✗ 3. TNPUNDPN
- ✓ 4. NTPUDNNP

Question ID : 26433095980

Option 1 ID : 264330376689

Option 2 ID : 264330376690

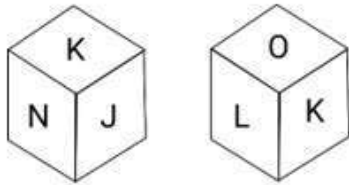
Option 3 ID : 264330376692

Option 4 ID : 264330376691

Status : Answered

Chosen Option : 4

Q.10 Six letters, J, K, L, M, N and O, are written on the different faces of a dice. Two positions of this dice are shown in the given figure. Find the letter on the face opposite to M.



- Ans
- 1. L
 - 2. K
 - 3. O
 - 4. N

Question ID : 264330106170

Option 1 ID : 264330416984

Option 2 ID : 264330416982

Option 3 ID : 264330416981

Option 4 ID : 264330416983

Status : Answered

Chosen Option : 2

Q.11 Six persons U, V, W, X, Y, Z are sitting in a circle facing each other. V is between X and W. U is between Y and W. Z is to the immediate right of X. Who is the immediate neighbour of both U and Z?

- Ans
- 1. V
 - 2. W
 - 3. X
 - 4. Y

Question ID : 26433086248

Option 1 ID : 264330338686

Option 2 ID : 264330338687

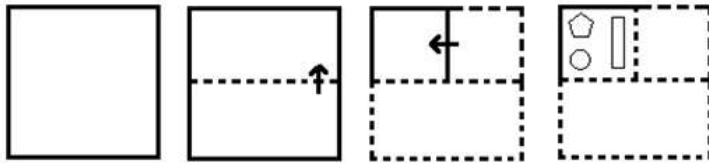
Option 3 ID : 264330338688

Option 4 ID : 264330338685

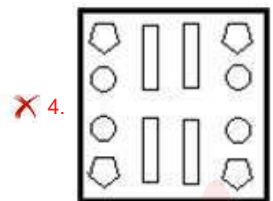
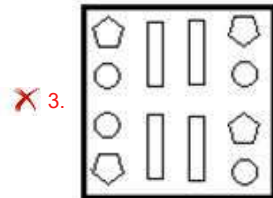
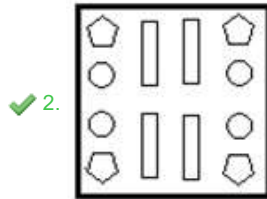
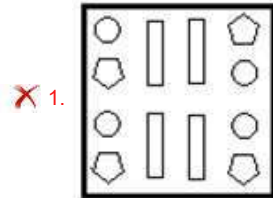
Status : Answered

Chosen Option : 4

Q.12 The sequence of folding a piece of paper and the manner in which the folded paper is cut is shown in the following figures. How would this paper look when unfolded?



Ans



Question ID : 26433074799

Option 1 ID : 264330293284

Option 2 ID : 264330293286

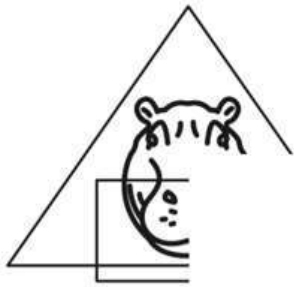
Option 3 ID : 264330293287

Option 4 ID : 264330293285

Status : Answered

Chosen Option : 2

Q.13 Which of the following option figures will complete the pattern in the figure given below?



Ans



Question ID : 26433089625

Option 1 ID : 264330352004

Option 2 ID : 264330352003

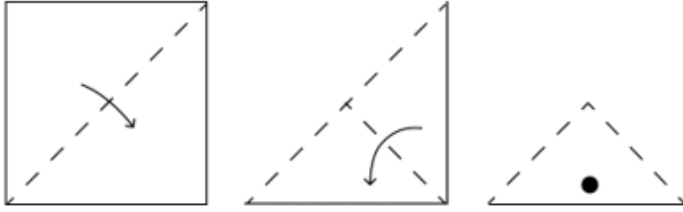
Option 3 ID : 264330352001

Option 4 ID : 264330352002

Status : Answered


Chosen Option : 4

Q.14 A square sheet of paper is folded along the dotted line successively along the directions shown and is then punched in the last. How would the paper look when unfolded?

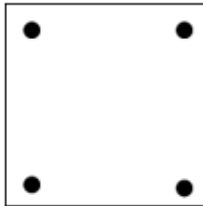


Ans

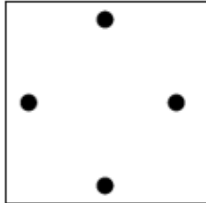
1.



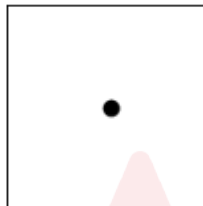
2.



3.



4.



Question ID : 264330172153

Option 1 ID : 264330675187

Option 2 ID : 264330675190

Option 3 ID : 264330675189

Option 4 ID : 264330675188

Status : Answered

Chosen Option : 3

Q.15 Select the number from among the given options that can replace the question mark (?) in the following series.

30, 45, 75, 135, 255, ?

Ans 1. 495

2. 634

3. 430

4. 568

Question ID : 264330109756

Option 1 ID : 264330431301

Option 2 ID : 264330431304

Option 3 ID : 264330431302

Option 4 ID : 264330431303

Status : Answered

Chosen Option : 1

Q.16 Which two signs should be interchanged to make the given equation correct?
 $16 \div 4 + 20 \times 82 - 14 = 148$

Ans 1. = and \times

2. + and -

3. + and \times

4. + and =

Question ID : 26433085733

Option 1 ID : 264330336636

Option 2 ID : 264330336633

Option 3 ID : 264330336634

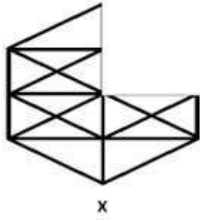
Option 4 ID : 264330336635

Status : Answered

Chosen Option : 3

Adda247

Q.17 Select a figure from amongst the four given options which, when placed in the blank space of figure (X), would complete the pattern.




Ans

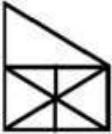
1.



2.



3.



4.



Question ID : 264330102216

Option 1 ID : 264330401330

Option 2 ID : 264330401332

Option 3 ID : 264330401331

Option 4 ID : 264330401329

Status : Answered

Chosen Option : 2

Q.18 In a certain code, if 15-20-17-2-7-0-18-5 denotes PURCHASE and 14-17-3-4-18 denotes ORDER, then what does 15-17-14-2-4-18-19 denote?

Ans 1. ARRANGE

2. PACKETS

3. PROCESS

4. PROCEED

Question ID : 264330100890

Option 1 ID : 264330396108

Option 2 ID : 264330396107

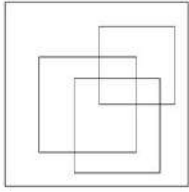
Option 3 ID : 264330396105

Option 4 ID : 264330396106

Status : Answered

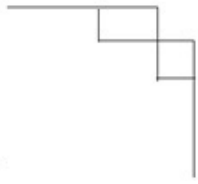
Chosen Option : 3

Q.19 Select the option figure which is embedded in the given figure as its part (rotation is NOT allowed).

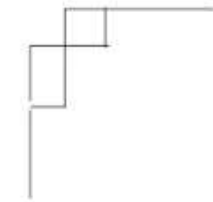


Ans

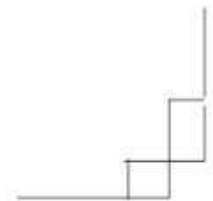
✓ 1.



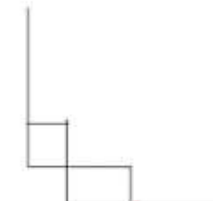
✗ 2.



✗ 3.



✗ 4.



Question ID : 26433076729

Option 1 ID : 264330300980

Option 2 ID : 264330300982


Option 3 ID : 264330300981

Option 4 ID : 264330300983

Status : Answered

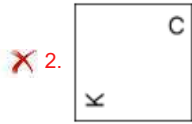
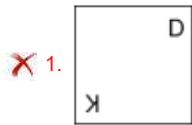
Chosen Option : 1

Q.20 Given below is a series of figures – A, B, C and D which follow a particular pattern. Which of the given option figures should come in place of E to continue the series?



(A) (B) (C) (D) (E)

Ans



Question ID : 264330113643

Option 1 ID : 264330446657

Option 2 ID : 264330446659

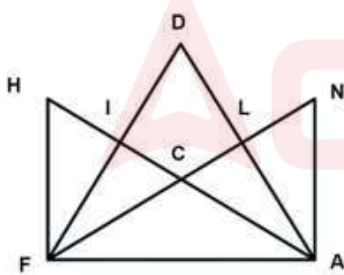
Option 3 ID : 264330446660

Option 4 ID : 264330446658

Status : Answered

Chosen Option : 4

Q.21 How many triangles are there in the given figure?



Ans 1. 25

2. 19

3. 11

4. 14

Question ID : 26433080670

Option 1 ID : 264330316616

Option 2 ID : 264330316614

Option 3 ID : 264330316613

Option 4 ID : 264330316615

Status : Answered

Chosen Option : 3

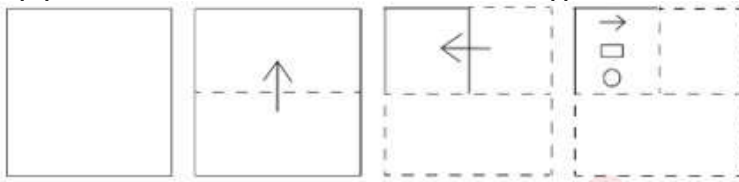
Q.22 Select the option that is related to the fourth number in the same way as the first number is related to the second number and the fifth number is related to the sixth number.

311 : 1244 :: ? : 1760 :: 531 : 2124

- Ans
- 1. 395
 - 2. 410
 - 3. 440
 - 4. 352

Question ID : 26433052017
 Option 1 ID : 264330203370
 Option 2 ID : 264330203371
 Option 3 ID : 264330203372
 Option 4 ID : 264330203373
 Status : Answered
 Chosen Option : 3

Q.23 A paper is folded and cut as shown below. How will it appear when unfolded?



Ans

- 1.
- 2.
- 3.
- 4.

Question ID : 264330112987
 Option 1 ID : 264330444033
 Option 2 ID : 264330444035
 Option 3 ID : 264330444034
 Option 4 ID : 264330444036
 Status : Answered
 Chosen Option : 4

Q.24 Select the option that is related to the fifth letter-cluster in the same way as the second letter-cluster is related to the first letter-cluster and the fourth letter-cluster is related to the third letter-cluster.

INCH : EKAG :: INKS : EKIR :: IDOL : ?

- Ans
- 1. DAML
 - 2. EANJ
 - 3. EAMK
 - 4. EANK

Question ID : 26433076457
Option 1 ID : 264330299892
Option 2 ID : 264330299894
Option 3 ID : 264330299893
Option 4 ID : 264330299895
Status : Answered
Chosen Option : 3

Q.25 Two statements are given followed by two conclusions numbered I and II. Assuming the statements to be true, even if they seem to be at variance from commonly known facts, decide which of the conclusions logically follow(s) from the statements.

Statements:

Some Baskets are Cakes.

Some Cakes are Tarts.

Conclusions:

I. Some Cakes are Baskets.

II. Some Tarts are Cakes.

- Ans
- 1. Only conclusion I follows.
 - 2. Only conclusion II follows.
 - 3. Neither conclusion I nor II follows.
 - 4. Both conclusions I and II follow.

Question ID : 26433076605
Option 1 ID : 264330300484
Option 2 ID : 264330300485
Option 3 ID : 264330300487
Option 4 ID : 264330300486
Status : Answered
Chosen Option : 4

Section : Numerical Ability

Q.1 The radius of a sphere is 1.65 cm. Find the exact surface area (in cm^2) of this sphere.

- Ans
- 1. 10.79π
 - 2. 10.69π
 - 3. 10.89π
 - 4. 10.99π

Question ID : 264330112559
Option 1 ID : 264330442322
Option 2 ID : 264330442321
Option 3 ID : 264330442324
Option 4 ID : 264330442323
Status : Answered
Chosen Option : 3

Q.2 The ratio of the number of boys to that of the girls in a school is 9 : 13. If the total number of boys and girls in the school is 2134, what is the number of boys in that school?

- Ans
- 1. 855
 - 2. 891
 - 3. 882
 - 4. 873

Question ID : 264330131166
Option 1 ID : 264330513778
Option 2 ID : 264330513775
Option 3 ID : 264330513776
Option 4 ID : 264330513777
Status : Answered
Chosen Option : 4

Q.3 The price of a computer is ₹34,000. What will be the price of the computer (in ₹) after a reduction of 17%?

- Ans
- 1. 26,200
 - 2. 30,500
 - 3. 28,220
 - 4. 27,380

Question ID : 264330103465
Option 1 ID : 264330406168
Option 2 ID : 264330406166
Option 3 ID : 264330406165
Option 4 ID : 264330406167
Status : Answered
Chosen Option : 3

Q.4 The average height of 16 students of a group is 160 cm. If the average height of the first 6 students in the group is 150 cm and those of the last 8 students is 165 cm, then find the average height of the remaining two students, in cm.

- Ans
- 1. 340
 - 2. 260
 - 3. 170
 - 4. 150

Question ID : 264330118041
Option 1 ID : 264330463979
Option 2 ID : 264330463980
Option 3 ID : 264330463981
Option 4 ID : 264330463982
Status : Answered
Chosen Option : 3

Q.5 The salaries of P and Q together amount to ₹4,32,000. P and Q spend 75% and 61% of their salaries, respectively. If their savings are equal, then what is P's salary?

- Ans
- 1. ₹2,36,750
 - 2. ₹2,63,750
 - 3. ₹2,63,250
 - 4. ₹2,36,250

Question ID : 264330177579
Option 1 ID : 264330696432
Option 2 ID : 264330696434
Option 3 ID : 264330696433
Option 4 ID : 264330696431
Status : Answered
Chosen Option : 3

Q.6 The simple interest on ₹24,000 at a certain rate of interest for 3 years is ₹7,200. What will be the compound interest(compounded annually) on the same sum at the same rate and for the same time?

- Ans
- 1. ₹7,954
 - 2. ₹7,854
 - 3. ₹7,845
 - 4. ₹7,944

Question ID : 264330104196
Option 1 ID : 264330409085
Option 2 ID : 264330409087
Option 3 ID : 264330409088
Option 4 ID : 264330409086
Status : Answered
Chosen Option : 4

Q.7 What is the difference between the total surface area and the curved area of a hemisphere having a diameter of 14 cm? (Use $\pi = \frac{22}{7}$)

- Ans
- 1. 180 cm²
 - 2. 108 cm²
 - 3. 154 cm²
 - 4. 148 cm²

Question ID : 264330119368
Option 1 ID : 264330467762
Option 2 ID : 264330467759
Option 3 ID : 264330467761
Option 4 ID : 264330467760
Status : Answered
Chosen Option : 3

Q.8 A garrison of 1500 men has provisions for 12 days. How long will the provisions last if the garrison is increased to 2000 men?

- Ans 1. 12 days
 2. 9 days
 3. 10 days
 4. 6 days

Question ID : 264330182581

Option 1 ID : 264330716118

Option 2 ID : 264330716116

Option 3 ID : 264330716117

Option 4 ID : 264330716115

Status : Answered

Chosen Option : 2

Q.9 Which of the following numbers is greater than the sum of all the prime factors of 1560?

- Ans 1. 21
 2. 22
 3. 23
 4. 41

Question ID : 264330109232

Option 1 ID : 264330429206

Option 2 ID : 264330429208

Option 3 ID : 264330429205

Option 4 ID : 264330429207

Status : Answered

Chosen Option : 4

Q.10 राम ने किशन से 20% साधारण ब्याज पर ₹30,000 का ऋण लिया। वह 4 वर्ष के लिए 1 वर्ष के अंत में चार समान किस्तों में ब्याज सहित ऋण चुकाने के लिए सहमत होता है। हालाँकि, किशन एक शर्त रखता है कि वह तब तक उधार दी गई मूल राशि पर ब्याज की गणना करता रहेगा, जब तक कि राम पूरी तरह से अपना ऋण चुका नहीं देता। प्रत्येक किस्त की धनराशि क्या होगी?

- Ans 1. ₹12,450
 2. ₹11,500
 3. ₹13,500
 4. ₹13,000

Question ID : 264330118086

Option 1 ID : 264330464160

Option 2 ID : 264330464162

Option 3 ID : 264330464159

Option 4 ID : 264330464161

Status : Answered

Chosen Option : 3

Q.11 Simplify $(0.85 \times 3.4 \times 2.4) \div 0.3$.

- Ans
- 1. 24.04
 - 2. 24.34
 - 3. 23.02
 - 4. 23.12

Question ID : 264330111443
Option 1 ID : 264330437857
Option 2 ID : 264330437858
Option 3 ID : 264330437859
Option 4 ID : 264330437860
Status : Answered
Chosen Option : 4

Q.12 The marked price of a table lamp is ₹1,500. If the marked price is 20% above the cost price and the table lamp is sold at a discount of 10%, then find the profit percentage.

- Ans
- 1. 7%
 - 2. 9%
 - 3. 8%
 - 4. 10%

Question ID : 264330123978
Option 1 ID : 264330485744
Option 2 ID : 264330485746
Option 3 ID : 264330485745
Option 4 ID : 264330485747
Status : Answered
Chosen Option : 3

Q.13 Aman bought two chairs for ₹1,800. He sold the first chair at a 12% profit and the second one at a 20% profit. Had he sold the first chair at a 20% profit and the second one at a 12% profit, he would have received ₹36 more. Find the difference between the cost-price of the two chairs.

- Ans
- 1. ₹450
 - 2. ₹650
 - 3. ₹525
 - 4. ₹675

Question ID : 264330104406
Option 1 ID : 264330409925
Option 2 ID : 264330409928
Option 3 ID : 264330409927
Option 4 ID : 264330409926
Status : Answered
Chosen Option : 1

Q.14 The LCM of two numbers is 18 times their HCF. The sum of the LCM and HCF is 855. If one number is 81, then what is the other number?

- Ans
- 1. 458
 - 2. 450
 - 3. 440
 - 4. 448

Question ID : 264330104269
Option 1 ID : 264330409377
Option 2 ID : 264330409378
Option 3 ID : 264330409380
Option 4 ID : 264330409379
Status : Answered
Chosen Option : 2

Q.15 काजल अपनी साइकिल से स्कूल जाती है। यदि वह 4 km/h अधिक चाल से चलती है, तो वह निर्धारित समय से 3 मिनट पहले स्कूल पहुंचती है, यदि वह 2 km/h कम चाल से चलती है, तो वह निर्धारित समय से 2 मिनट बाद स्कूल पहुंचती है। उसके घर से स्कूल की दूरी (Km में) कितनी है?

- Ans
- 1. 4
 - 2. 3
 - 3. 8
 - 4. 6

Question ID : 264330108985
Option 1 ID : 264330428217
Option 2 ID : 264330428220
Option 3 ID : 264330428219
Option 4 ID : 264330428218
Status : Answered
Chosen Option : 2

Section : Computer Proficiency

Q.1 Which of the following statements related to attaching a file to an email is correct?

- Ans
- 1. Writing a subject field is mandatory while sending an attachment.
 - 2. We can't use CC field while sending an attachment.
 - 3. We can't attach an audio file in an email attachment.
 - 4. In Gmail, If your file is greater than 25 MB, Gmail automatically adds a Google Drive link in the email instead of including it as an attachment.

Question ID : 264330180383
Option 1 ID : 264330707501
Option 2 ID : 264330707500
Option 3 ID : 264330707499
Option 4 ID : 264330707502
Status : Answered
Chosen Option : 1

Q.2 एमएस वर्ड 365 (MS Word 365) में निम्नलिखित में से किस विकल्प से आप किसी डॉक्यूमेंट के लेआउट के विभिन्न पहलुओं, जैसे पेपर साइज़, मार्जिन, ओरिएंटेशन और पेज नंबरिंग को अनुकूलित कर सकते हैं?

- Ans
- 1. डॉक्यूमेंट इंस्पेक्टर
 - 2. प्रिंट लेआउट व्यू
 - 3. पेज सेटअप
 - 4. नेविगेशन पेन

Question ID : 264330173343
Option 1 ID : 264330679854
Option 2 ID : 264330679851
Option 3 ID : 264330679852
Option 4 ID : 264330679853
Status : Answered
Chosen Option : 3

Q.3 Which of the following is NOT a characteristic of communication on the internet?

- Ans
- 1. It is asynchronous.
 - 2. It is interactive.
 - 3. It is global.
 - 4. It is always private.

Question ID : 264330178555
Option 1 ID : 264330700247
Option 2 ID : 264330700248
Option 3 ID : 264330700249
Option 4 ID : 264330700250
Status : Answered
Chosen Option : 2

Q.4 In MS Excel 365, if you set a row height to 0 (zero), what happens to the row?

- Ans
- 1. It hides the row.
 - 2. It asks for a new value.
 - 3. It sets the default height.
 - 4. It returns to the last entered value.

Question ID : 264330180632
Option 1 ID : 264330708497
Option 2 ID : 264330708495
Option 3 ID : 264330708496
Option 4 ID : 264330708498
Status : Answered
Chosen Option : 2

Q.5 In Microsoft Excel 365, which of the following functions is used for displaying the current date?

- Ans
- 1. Time()
 - 2. Now()
 - 3. Today()
 - 4. Day()

Question ID : 264330182058
Option 1 ID : 264330714072
Option 2 ID : 264330714071
Option 3 ID : 264330714073
Option 4 ID : 264330714074
Status : Answered
Chosen Option : 2

Q.6 In MS Excel 365, what is the keyboard shortcut to automatically adjust the width of a column to fit the content in Excel?

- Ans
- 1. Ctrl + W
 - 2. Ctrl + Spacebar
 - 3. Ctrl + A
 - 4. ALT + H then O and then I

Question ID : 264330177664
Option 1 ID : 264330696771
Option 2 ID : 264330696774
Option 3 ID : 264330696772
Option 4 ID : 264330696773
Status : Answered
Chosen Option : 2

Q.7 When we press the control key with the letter E, what happens to the text in the MS-Word 365?

- Ans
- 1. It selects the whole content on the file.
 - 2. Right aligns the contents on the page.
 - 3. Centers the contents on the page.
 - 4. Left aligns the contents on the page.

Question ID : 264330171417
Option 1 ID : 264330672286
Option 2 ID : 264330672284
Option 3 ID : 264330672285
Option 4 ID : 264330672283
Status : Answered
Chosen Option : 3

Q.8 Which action in MS-Word 365, allows you to remove selected text from its original location and place it on the clipboard?

- Ans
- 1. Copy
 - 2. Cut
 - 3. Paste
 - 4. Select All

Question ID : 264330173355
Option 1 ID : 264330679900
Option 2 ID : 264330679899
Option 3 ID : 264330679901
Option 4 ID : 264330679902
Status : Answered
Chosen Option : 2

Q.9 Which of the following is the shortcut key to Paste text in MS Word 365?

- Ans
- 1. Ctrl+Shift+V
 - 2. Shift+V
 - 3. Ctrl+V
 - 4. Ctrl+C

Question ID : 264330176727
Option 1 ID : 264330693125
Option 2 ID : 264330693126
Option 3 ID : 264330693123
Option 4 ID : 264330693124
Status : Answered
Chosen Option : 3

Q.10 Which of the following is NOT a common method of opening a document in a web-based document editor like Google Docs?

- Ans**
- 1. Typing the entire document from scratch
 - 2. Creating a new document from a template
 - 3. Importing a document from a web link
 - 4. Uploading the document from your computer

Question ID : 264330180843

Option 1 ID : 264330709336

Option 2 ID : 264330709337

Option 3 ID : 264330709338

Option 4 ID : 264330709335

Status : Answered

Chosen Option : 4



Constable Executive Male and Female in Delhi Police Examination 2023

Roll Number	
Candidate Name	
Venue Name	iON Digital Zone iDZ 1 Patia
Exam Date	30/11/2023
Exam Time	9:00 AM - 10:30 AM
Subject	Constable Executive Male and Female in Delhi Police Examination 2023

Section : General Knowledge

Q.1 Annapurna Finance Private Limited had its origin as a not-for-profit company called _____, an NGO that helped poor women in Odisha.

- Ans
- 1. Alternative for Rural Movement
 - 2. Peoples Forum
 - 3. All India Development Trust
 - 4. Action for Rural Transformation

Question ID : 264330116495

Option 1 ID : 264330458066

Option 2 ID : 264330458067

Option 3 ID : 264330458065

Option 4 ID : 264330458068

Status : Marked For Review

Chosen Option : 3

Q.2 Hanukkah is a _____ festival.

- Ans
- 1. Jain
 - 2. Jewish
 - 3. Sikh
 - 4. Buddhist

Question ID : 264330109313

Option 1 ID : 264330429529

Option 2 ID : 264330429530

Option 3 ID : 264330429532

Option 4 ID : 264330429531

Status : Not Answered

Chosen Option : --

Q.3 In which year did Mihir Sen create history by being the only man to swim the five oceans in one calendar year?

- Ans
- 1. 1958
 - 2. 1966
 - 3. 1949
 - 4. 1950

Question ID : 264330119276

Option 1 ID : 264330467392

Option 2 ID : 264330467391

Option 3 ID : 264330467393

Option 4 ID : 264330467394

Status : Not Answered

Chosen Option : --

Q.4 Match the diseases in group I with the modes of transmission in group II.

- | Group I | | Group II | |
|----------------|-------|---------------------------------|--|
| (a) Meningitis | (i) | inoculation into skin or mucosa | |
| (b) Rabies | (ii) | contaminated food or water | |
| (c) Typhoid | (iii) | contact with soil | |
| (d) Tetanus | (iv) | droplet infection | |

- Ans 1. (a)-(iv), (b)-(i), (c)-(iii), (d)-(ii)
 2. (a)-(i), (b)-(iv), (c)-(ii), (d)-(iii)
 3. (a)-(ii), (b)-(i), (c)-(iv), (d)-(iii)
 4. (a)-(iv), (b)-(i), (c)-(ii), (d)-(iii)

Question ID : 264330182449

Option 1 ID : 264330715598

Option 2 ID : 264330715595

Option 3 ID : 264330715596

Option 4 ID : 264330715597

Status : Answered

Chosen Option : 4

Q.5 Which edition of the FIFA U-17 Women's World Cup was hosted by India in 2022?

- Ans 1. Fifth
 2. Sixth
 3. Fourth
 4. Seventh

Question ID : 264330113733

Option 1 ID : 264330447019

Option 2 ID : 264330447017

Option 3 ID : 264330447020

Option 4 ID : 264330447018

Status : Marked For Review

Chosen Option : 2

Q.6 According to Planning commission of India (2011-12), which group of states has the highest poverty ratio?

- Ans 1. Maharashtra and Gujarat
 2. Madhya Pradesh and Uttar Pradesh
 3. Chhattisgarh and Jharkhand
 4. Punjab and Haryana

Question ID : 264330119915

Option 1 ID : 264330469937

Option 2 ID : 264330469935

Option 3 ID : 264330469938

Option 4 ID : 264330469936

Status : Answered

Chosen Option : 3

Q.7 When did the Pro Wrestling League start in India?

Ans 1. 2015

2. 2017

3. 2010

4. 2014

Question ID : 264330176079

Option 1 ID : 264330690612

Option 2 ID : 264330690613

Option 3 ID : 264330690614

Option 4 ID : 264330690611

Status : Not Answered

Chosen Option : --

Q.8 The Ramakrishna Mission was founded by _____ to regenerate Indian society by promoting the Vedanta philosophy.

Ans 1. Swami Vivekananda

2. Swami Dayananda Saraswati

3. Debendranath Tagore

4. Raja Ram Mohan Roy

Question ID : 264330112402

Option 1 ID : 264330441693

Option 2 ID : 264330441695

Option 3 ID : 264330441694

Option 4 ID : 264330441696

Status : Answered

Chosen Option : 2

Q.9 'Koman' and 'Kuruwa' are the names of _____ in India.

Ans 1. peaks of Western Ghats

2. artificial lakes

3. tribes of Himalaya

4. slash and burn agriculture

Question ID : 264330120311

Option 1 ID : 264330471498

Option 2 ID : 264330471497

Option 3 ID : 264330471496

Option 4 ID : 264330471495

Status : Marked For Review

Chosen Option : 3

Q.10 In which of the following sessions did the Indian National Congress decide to boycott the Simon Commission?

Ans 1. Poona session

2. Madras session

3. Bombay session

4. Allahabad session

Question ID : 264330117807

Option 1 ID : 264330463045

Option 2 ID : 264330463043

Option 3 ID : 264330463044

Option 4 ID : 264330463046

Status : Not Attempted and Marked For Review

Chosen Option : --

Q.11 In 1991, India met with an economic crisis where the _____ reserves fell so low that they were not sufficient for even a _____ .

- Ans
- 1. foreign exchange; quarter
 - 2. gold; month
 - 3. gold; year
 - 4. foreign exchange; fortnight

Question ID : 264330109129
Option 1 ID : 264330428793
Option 2 ID : 264330428794
Option 3 ID : 264330428796
Option 4 ID : 264330428795
Status : Answered
Chosen Option : 1

Q.12 Kailasa temple is made up of which of the following types of rock?

- Ans
- 1. Basalt
 - 2. Granite
 - 3. Marble
 - 4. Pumice

Question ID : 264330106251
Option 1 ID : 264330417306
Option 2 ID : 264330417307
Option 3 ID : 264330417308
Option 4 ID : 264330417305
Status : Not Answered
Chosen Option : --

Q.13 Suppose a person has four acres of land in India, and he actually needs only two workers and himself to carry out various operations on his farm in a year, but if he employs five workers and his family members such as his wife and children, this situation known as _____.

- Ans
- 1. Transitional Unemployment
 - 2. Open Unemployment
 - 3. Seasonal Unemployment
 - 4. Disguised Unemployment

Question ID : 264330119824
Option 1 ID : 264330469573
Option 2 ID : 264330469574
Option 3 ID : 264330469571
Option 4 ID : 264330469572
Status : Not Answered
Chosen Option : --

Q.14 The horizontal distance between two adjacent crests or troughs is known as the _____.

- Ans
- 1. wave speed
 - 2. wave frequency
 - 3. wave period
 - 4. wave length

Question ID : 264330118521
Option 1 ID : 264330465485
Option 2 ID : 264330465488
Option 3 ID : 264330465486
Option 4 ID : 264330465487
Status : Not Answered
Chosen Option : --

Q.15 Fundamental duties were first added by which Constitutional Amendment Act?

- Ans
- 1. 48th Constitutional Amendment Act
 - 2. 46th Constitutional Amendment Act
 - 3. 42nd Constitutional Amendment Act
 - 4. 44th Constitutional Amendment Act

Question ID : 264330111517
Option 1 ID : 264330438156
Option 2 ID : 264330438155
Option 3 ID : 264330438153
Option 4 ID : 264330438154
Status : Answered
Chosen Option : 3

Q.16 How many of the main fixed instruments can be found in the Jantar Mantar, Jaipur?

- Ans
- 1. 25
 - 2. 17
 - 3. 20
 - 4. 15

Question ID : 26433090745
Option 1 ID : 264330356403
Option 2 ID : 264330356402
Option 3 ID : 264330356404
Option 4 ID : 264330356401
Status : Not Answered
Chosen Option : --

Q.17 Which of the following were NOT part of the comprehensive liberalisation reforms introduced in July 1991?

- Ans
- 1. Disinvestment and public enterprise reforms
 - 2. Demographic reforms
 - 3. Financial sector reforms
 - 4. Trade and capital flow reforms

Question ID : 264330120212
Option 1 ID : 264330471106
Option 2 ID : 264330471105
Option 3 ID : 264330471104
Option 4 ID : 264330471103
Status : Not Answered
Chosen Option : --

Q.18 The inscription in Sanskrit, recording the repairing of the Mauryan dam at Junagarh belonged to whom among the following?

- Ans
- 1. Gautamiputra Satakarni
 - 2. Menander
 - 3. Kanishka
 - 4. Rudradaman

Question ID : 264330120283
Option 1 ID : 264330471385
Option 2 ID : 264330471386
Option 3 ID : 264330471383
Option 4 ID : 264330471384
Status : Not Answered
Chosen Option : --

Q.19 Who among the following published the book 'Stripurushtulna', criticising the social differences between men and women?

- Ans
- 1. Tarabai Shinde
 - 2. Pandita Ramabai
 - 3. Ishwar Chandra Vidyasagar
 - 4. Vijaya Laxmi Pandit

Question ID : 264330119022
Option 1 ID : 264330466745
Option 2 ID : 264330466743
Option 3 ID : 264330466746
Option 4 ID : 264330466744
Status : Not Answered
Chosen Option : --

Q.20 Which of the following rivers is also known as 'Dakshin Ganga'?

- Ans
- 1. Bhargavi River
 - 2. Mahanadi River
 - 3. Pranrita River
 - 4. Godavari River

Question ID : 264330178011
Option 1 ID : 264330698121
Option 2 ID : 264330698120
Option 3 ID : 264330698122
Option 4 ID : 264330698119
Status : Answered
Chosen Option : 4

Q.21 Which Article of the Indian Constitution restricts and prohibits religious instructions in the educational institutions which are maintained by the Government and funded by the government?

- Ans
- 1. Article 29
 - 2. Article 25
 - 3. Article 23
 - 4. Article 28

Question ID : 264330119681
Option 1 ID : 264330469002
Option 2 ID : 264330469000
Option 3 ID : 264330468999
Option 4 ID : 264330469001
Status : Answered
Chosen Option : 2

Q.22 Which of the following Articles of the Indian Constitution is related with equal justice and free legal aid?

- Ans
- 1. Article 39 A
 - 2. Article 48 A
 - 3. Article 51 A
 - 4. Article 43 A

Question ID : 264330180055
Option 1 ID : 264330706203
Option 2 ID : 264330706205
Option 3 ID : 264330706206
Option 4 ID : 264330706204
Status : Answered
Chosen Option : 4

Q.23 In an economy, if the gross national product at factor cost is ₹10,000 crores, depreciation is ₹250 crores, the net factor income from abroad is ₹500 crores, what is the value of national income?

- Ans
- 1. ₹10,750 crores
 - 2. ₹9,250 crores
 - 3. ₹10,250 crores
 - 4. ₹9,750 crores

Question ID : 264330117976
Option 1 ID : 264330463719
Option 2 ID : 264330463722
Option 3 ID : 264330463720
Option 4 ID : 264330463721
Status : Answered
Chosen Option : 3

Q.24 From which country is the legislative procedure in the Indian Constitution taken from?

- Ans
- 1. Australia
 - 2. Ireland
 - 3. Japan
 - 4. United Kingdom

Question ID : 264330183146
Option 1 ID : 264330718316
Option 2 ID : 264330718318
Option 3 ID : 264330718317
Option 4 ID : 264330718319
Status : Answered
Chosen Option : 4

Q.25 Which of the following countries is the winner of the FIFA Football World Cup 2022?

- Ans
- 1. Argentina
 - 2. Brazil
 - 3. England
 - 4. Japan

Question ID : 264330130622
Option 1 ID : 264330511600
Option 2 ID : 264330511599
Option 3 ID : 264330511602
Option 4 ID : 264330511601
Status : Answered
Chosen Option : 1

Q.26 The jurisdiction of the Supreme Court is guaranteed by the:

- Ans
- 1. Chief Justice
 - 2. Constitution
 - 3. President
 - 4. Parliament

Question ID : 264330173525
Option 1 ID : 264330680581
Option 2 ID : 264330680579
Option 3 ID : 264330680582
Option 4 ID : 264330680580
Status : Answered
Chosen Option : 1

Q.27 The capital of Satakarni I of the Satavahanas was _____.

- Ans
- 1. Anahilapura
 - 2. Prabhas Patan
 - 3. Anahilapatan
 - 4. Pratisthana

Question ID : 264330120139
Option 1 ID : 264330470813
Option 2 ID : 264330470811
Option 3 ID : 264330470814
Option 4 ID : 264330470812
Status : Not Answered
Chosen Option : --

Q.28 Majority of India's foreign trade is carried out by which means of transportation?

- Ans
- 1. Road transportation
 - 2. Sea transportation
 - 3. Rail transportation
 - 4. Air transportation

Question ID : 264330120317
Option 1 ID : 264330471522
Option 2 ID : 264330471521
Option 3 ID : 264330471519
Option 4 ID : 264330471520
Status : Answered
Chosen Option : 2

Q.29 Who among the following, as Indian slide instrumentalist, vocalist and composer, initiated the Planet Symphony Orchestra in 1919?

- Ans
- 1. Mohan Kannon
 - 2. Rahul Ram
 - 3. Abhay Jodhpurkar
 - 4. Narasimhan Ravikiran

Question ID : 264330111959
Option 1 ID : 264330439923
Option 2 ID : 264330439924
Option 3 ID : 264330439921
Option 4 ID : 264330439922
Status : Not Answered
Chosen Option : --

Q.30 Bhagat Singh and _____ threw a bomb in the Central Legislative Assembly on 8 April 1929.

- Ans
- 1. Jaidev Kapoor
 - 2. Batukeshwar Dutt
 - 3. Sukhdev Thapar
 - 4. Shivaram Rajguru

Question ID : 264330114112
Option 1 ID : 264330448536
Option 2 ID : 264330448535
Option 3 ID : 264330448533
Option 4 ID : 264330448534
Status : Answered
Chosen Option : 3

Q.31 On which of the following matters of the State List can Delhi's Legislature make laws?

- Ans
- 1. Police
 - 2. Public order
 - 3. Land
 - 4. Health

Question ID : 264330120199
Option 1 ID : 264330471053
Option 2 ID : 264330471051
Option 3 ID : 264330471054
Option 4 ID : 264330471052
Status : Answered
Chosen Option : 4

Q.32 Which festival is celebrated to commemorate the birth anniversary of Lord Buddha?

- Ans 1. Parinirvana Day
 2. Vesak
 3. Ullambana
 4. Kathina

Question ID : 264330118490
Option 1 ID : 264330465362
Option 2 ID : 264330465361
Option 3 ID : 264330465363
Option 4 ID : 264330465364
Status : Marked For Review
Chosen Option : 1

Q.33 Lai Haraoba, which literally means 'the festival of gods', is primarily celebrated in which state of India?

- Ans 1. Kerala
 2. Uttarakhand
 3. Himachal Pradesh
 4. Manipur

Question ID : 264330111789
Option 1 ID : 264330439241
Option 2 ID : 264330439244
Option 3 ID : 264330439243
Option 4 ID : 264330439242
Status : Answered
Chosen Option : 4

Q.34 Which of the following is the function of trade barriers?

- Ans 1. Restrict the flow of international goods and services
 2. Restrict the flow of Indian goods and services in India
 3. Ban making goods
 4. Restrict packed goods

Question ID : 264330117794
Option 1 ID : 264330462991
Option 2 ID : 264330462992
Option 3 ID : 264330462993
Option 4 ID : 264330462994
Status : Not Answered
Chosen Option : --

Q.35 Which of the following is known as the power house of cells?

- Ans 1. Nucleus
 2. Ribosomes
 3. Mitochondria
 4. Cytoplasm

Question ID : 264330117603
Option 1 ID : 264330462439
Option 2 ID : 264330462438
Option 3 ID : 264330462437
Option 4 ID : 264330462440
Status : Answered
Chosen Option : 3

Q.36 In the context of globalisation, FDI is an important term. What does the I stand for in FDI?

- Ans
- 1. Investor
 - 2. International
 - 3. Interest
 - 4. Investment

Question ID : 264330109405
Option 1 ID : 264330429900
Option 2 ID : 264330429898
Option 3 ID : 264330429897
Option 4 ID : 264330429899
Status : Answered
Chosen Option : 4

Q.37 Bhajan Sopori is associated with which of the following instruments?

- Ans
- 1. Violin
 - 2. Santoor
 - 3. Sarod
 - 4. Been

Question ID : 264330111944
Option 1 ID : 264330439861
Option 2 ID : 264330439863
Option 3 ID : 264330439862
Option 4 ID : 264330439864
Status : Not Answered
Chosen Option : --

Q.38 Who among the following wrote 'Nirmala'?

- Ans
- 1. Munshi Premchand
 - 2. Jaishankar Prasad
 - 3. Shrilal Shukla
 - 4. Ramdhari Singh

Question ID : 26433086912
Option 1 ID : 264330341291
Option 2 ID : 264330341289
Option 3 ID : 264330341292
Option 4 ID : 264330341290
Status : Not Answered
Chosen Option : --

Q.39 Which form of dance does Kumudini Lakhia perform?

- Ans
- 1. Manipuri
 - 2. Bharatanatyam
 - 3. Kathakali
 - 4. Kathak

Question ID : 26433086933
Option 1 ID : 264330341373
Option 2 ID : 264330341376
Option 3 ID : 264330341374
Option 4 ID : 264330341375
Status : Not Answered
Chosen Option : --

Q.40 Which of the following statements about water resource is correct?

- Ans 1. Water is a cyclic resource.
 2. Water is a biotic resource.
 3. Water is a non-renewable resource.
 4. Water is both, biotic and abiotic resource.

Question ID : 264330138013
Option 1 ID : 264330540662
Option 2 ID : 264330540659
Option 3 ID : 264330540661
Option 4 ID : 264330540660
Status : Not Answered
Chosen Option : --

Q.41 Veeranatyam is an ancient form of dance from which of these states?

- Ans 1. Rajasthan
 2. Andhra Pradesh
 3. Uttar Pradesh
 4. Punjab

Question ID : 264330109281
Option 1 ID : 264330429401
Option 2 ID : 264330429404
Option 3 ID : 264330429402
Option 4 ID : 264330429403
Status : Answered
Chosen Option : 2

Q.42 'The Story of My Experiments with Truth' is an autobiography of _____.

- Ans 1. Mahatma Gandhi
 2. Sardar Vallabhbhai Patel
 3. Jawaharlal Nehru
 4. Bhimrao Ambedkar

Question ID : 26433054171
Option 1 ID : 264330211669
Option 2 ID : 264330211670
Option 3 ID : 264330211668
Option 4 ID : 264330211671
Status : Answered
Chosen Option : 1

Q.43 According to the 2011 Census, the literacy rate among females in India is _____ compared to males.

- Ans 1. unpredictable
 2. equal
 3. lower
 4. higher

Question ID : 264330179275
Option 1 ID : 264330703106
Option 2 ID : 264330703105
Option 3 ID : 264330703104
Option 4 ID : 264330703103
Status : Answered
Chosen Option : 3

Q.44 Irregular growth of teeth is due to the deficiencies of vitamin ____.

- Ans 1. K
 2. A
 3. B
 4. D

Question ID : 264330120063
Option 1 ID : 264330470509
Option 2 ID : 264330470507
Option 3 ID : 264330470508
Option 4 ID : 264330470510
Status : Not Answered
Chosen Option : --

Q.45 Rashtrakuta ruler Dantidurga died without a male heir and was succeeded by his uncle_____.

- Ans 1. Amoghavarsha I
 2. Indra I
 3. Govinda I
 4. Krishna I

Question ID : 264330182259
Option 1 ID : 264330714861
Option 2 ID : 264330714860
Option 3 ID : 264330714859
Option 4 ID : 264330714862
Status : Not Answered
Chosen Option : --

Q.46 Which famous chemist refuted the theory of 'vitalism' by saying that organic substances can only be produced from living things?

- Ans 1. John Dalton
 2. Antoine Lavoisier
 3. Friedrich Wohler
 4. Marcellin Berthelot

Question ID : 264330177874
Option 1 ID : 264330697586
Option 2 ID : 264330697585
Option 3 ID : 264330697583
Option 4 ID : 264330697584
Status : Not Answered
Chosen Option : --

Q.47 With which of the following states is the 'Popir' dance associated?

- Ans 1. Arunachal Pradesh
 2. Madhya Pradesh
 3. Jharkhand
 4. Chhattisgarh

Question ID : 264330106193
Option 1 ID : 264330417073
Option 2 ID : 264330417075
Option 3 ID : 264330417074
Option 4 ID : 264330417076
Status : Answered
Chosen Option : 1

Q.48 The first Battle of Panipat was fought on 20 April 1526 between Babur and _____.

- Ans
- 1. Sikandar Lodi
 - 2. Mahmud Lodi
 - 3. Ibrahim Lodi
 - 4. Bahlul Lodi

Question ID : 264330113572
Option 1 ID : 264330446375
Option 2 ID : 264330446373
Option 3 ID : 264330446376
Option 4 ID : 264330446374
Status : Answered
Chosen Option : 3

Q.49 Who among the following has the power to make provision as he/she may think fit for the discharge of the functions of the Governor of a State in any contingency?

- Ans
- 1. Chief Justice of India
 - 2. President
 - 3. Prime Minister
 - 4. Chief Justice of the High Court

Question ID : 26433053627
Option 1 ID : 264330209811
Option 2 ID : 264330209810
Option 3 ID : 264330209813
Option 4 ID : 264330209812
Status : Answered
Chosen Option : 2

Q.50 From which Five-Year Plan period was the formulation and implementation of the Five-Year Plan discontinued by the Government of India?

- Ans
- 1. Twelfth Five-Year Plan
 - 2. Tenth Five-Year Plan
 - 3. Eleventh Five-Year Plan
 - 4. Ninth Five-Year Plan

Question ID : 264330111742
Option 1 ID : 264330439056
Option 2 ID : 264330439054
Option 3 ID : 264330439055
Option 4 ID : 264330439053
Status : Answered
Chosen Option : 1

Section : Reasoning

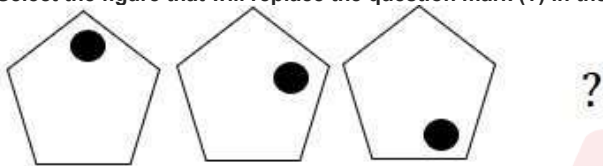
Q.1 16 is related to 24 following a certain logic. Following the same logic, 22 is related to 33. To which of the following is 36 related, following the same logic?

(NOTE: Operations should be performed on the whole numbers, without breaking down the numbers into their constituent digits. E.g. 13 – Operations on 13 such as adding/subtracting/multiplying etc. to 13 can be performed. Breaking down 13 into 1 and 3 and then performing mathematical operations on 1 and 3 is not allowed.)

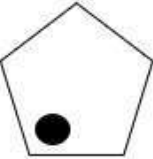
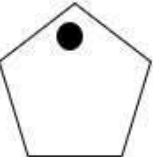


- Ans
- 1. 49
 - 2. 45
 - 3. 51
 - 4. 54

Question ID : 264330177413
Option 1 ID : 264330695824
Option 2 ID : 264330695825
Option 3 ID : 264330695826
Option 4 ID : 264330695823
Status : Answered
Chosen Option : 4

Q.2 Select the figure that will replace the question mark (?) in the following figure series.

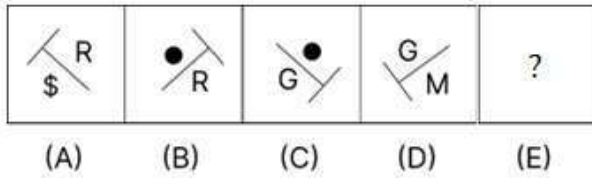


Ans

- 1. 
- 2. 
- 3. 
- 4. 

Question ID : 264330112030
Option 1 ID : 264330440207
Option 2 ID : 264330440205
Option 3 ID : 264330440206
Option 4 ID : 264330440208
Status : Answered
Chosen Option : 1

Q.3 Given below is a series of figures – A, B, C and D which follow a particular pattern. Which of the given option figures should come in place of E to continue the series?



Ans

- 1.
- 2.
- 3.
- 4.

Question ID : 264330111289

Option 1 ID : 264330437243

Option 2 ID : 264330437242

Option 3 ID : 264330437244

Option 4 ID : 264330437241

Status : Answered

Chosen Option : 2

Q.4 Two statements are given, followed by two conclusions numbered I and II. Assuming the statements to be true, even if they seem to be at variance with commonly known facts, decide which of the conclusions logically follow(s) from the statements.

Statements:

All houses are buildings.

Some houses are apartments.

Conclusions:

I. All buildings are houses.

II. Some buildings are apartments.

- Ans
- 1. Both Conclusions I and II follow.
 - 2. Neither Conclusion I nor II follows.
 - 3. Only Conclusion I follows.
 - 4. Only Conclusion II follows.

Question ID : 26433081677

Option 1 ID : 264330320543

Option 2 ID : 264330320544

Option 3 ID : 264330320541

Option 4 ID : 264330320542

Status : Answered

Chosen Option : 4

Q.5 Which figure should replace the question mark (?) if the following series were to be continued?

	♡		P		K		♡		I											
P	I	3	K	N	3	I	♡	♡	N	3	I	P	3	N	K	K	P	3	N	?
N				K				P				I								

Ans

✗ 1.

			♡
N	3	P	K
I			

✓ 2.

			K
♡	3	P	I
N			

✗ 3.

			♡
N	K	P	3
I			

✗ 4.

			N
♡	3	P	I
K			

Question ID : 264330103886

Option 1 ID : 264330407847

Option 2 ID : 264330407846

Option 3 ID : 264330407848

Option 4 ID : 264330407845

Status : Answered

Chosen Option : 2

Q.6 Which of the following option figures will complete the pattern in the figure given below?



Ans

1.



2.



3.



4.



Question ID : 26433080615

Option 1 ID : 264330316393

Option 2 ID : 264330316396

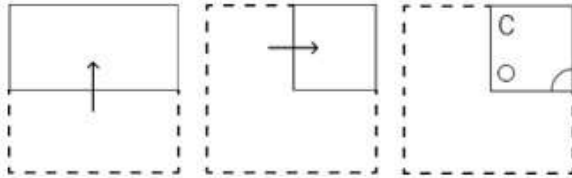
Option 3 ID : 264330316394

Option 4 ID : 264330316395

Status : Answered

Chosen Option : 3

Q.7 A paper is folded and cut as shown below. How will it appear when unfolded?



Ans

- 1.
- 2.
- 3.
- 4.

Question ID : 264330114712

Option 1 ID : 264330450934

Option 2 ID : 264330450933

Option 3 ID : 264330450935

Option 4 ID : 264330450936

Status : Answered

Chosen Option : 4

Q.8 If P denotes '×', Q denotes '+', R denotes '+', and S denotes '-', then what will come in place of '?' in the following equation?

$$(7)^2 R (8 Q 2) P 13 R (63 Q 7) P 8 S 41 = ?$$

- 1. 136
- 2. 132
- 3. 140
- 4. 128

Question ID : 26433069207

Option 1 ID : 264330271343

Option 2 ID : 264330271340

Option 3 ID : 264330271341

Option 4 ID : 264330271342

Status : Answered

Chosen Option : 2

Q.9 Select the option that represents the letters that, when sequentially placed from left to right in the blanks below, will complete the letter series.

_ L _ O P H _ N _ P H L N _ _ H L _ O _

- Ans
- 1. HNOLOPPN
 - 2. NHLOPONP
 - 3. NHOLOPPN
 - 4. HNLOOPNP

Question ID : 26433095982

Option 1 ID : 264330376700

Option 2 ID : 264330376697

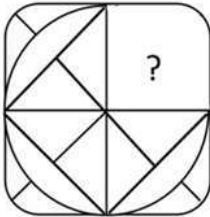
Option 3 ID : 264330376699

Option 4 ID : 264330376698

Status : Answered

Chosen Option : 4

Q.10 Select the figure from the options that can replace the question mark (?) and complete the given pattern.



Ans

- 1.
- 2.
- 3.
- 4.

Question ID : 26433082910

Option 1 ID : 264330325474

Option 2 ID : 264330325476

Option 3 ID : 264330325475

Option 4 ID : 264330325473

Status : Answered

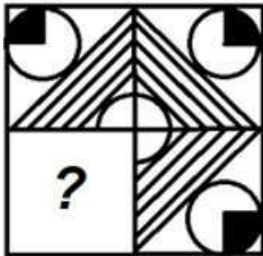
Chosen Option : 4

Q.11 Select the correct combination of mathematical signs that can sequentially replace the * signs and balance the given equation.
 $6 * 12 * 3 * 8 * 3 * 35$

- Ans
- 1. +, -, x, +, =
 - 2. +, -, x, +, =
 - 3. +, +, x, -, =
 - 4. +, x, -, +, =

Question ID : 26433079093
 Option 1 ID : 264330310379
 Option 2 ID : 264330310377
 Option 3 ID : 264330310378
 Option 4 ID : 264330310376
 Status : Answered
 Chosen Option : 3

Q.12 Which of the following answer figures complete the pattern by replacing the question mark? (rotation is NOT allowed).



Ans

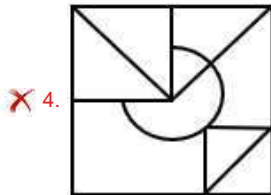
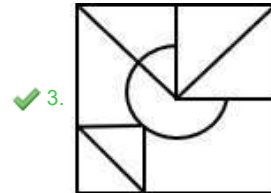
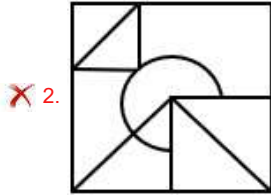
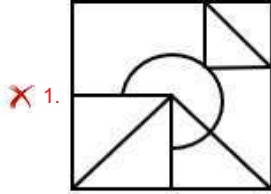
- 1.
- 2.
- 3.
- 4.

Question ID : 26433069252
 Option 1 ID : 264330271523
 Option 2 ID : 264330271522
 Option 3 ID : 264330271521
 Option 4 ID : 264330271520
 Status : Answered
 Chosen Option : 3

Q.13 The given figure is followed by four option figures. Select the option figure in which this figure is embedded (i.e., contains this figure in the same form; rotation is NOT allowed).



Ans



Question ID : 264330121620

Option 1 ID : 264330476652

Option 2 ID : 264330476654

Option 3 ID : 264330476653

Option 4 ID : 264330476651

Status : Answered

Chosen Option : 3

Q.14 In a certain code language, 'JAM' is written as 'KCP' and 'MUG' is written as 'NWJ'. How will 'TEA' be written in that language?

Ans ✓ 1. UGD

✗ 2. UGC

✗ 3. UFB

✗ 4. UFC

Question ID : 26433087176

Option 1 ID : 264330342343

Option 2 ID : 264330342344

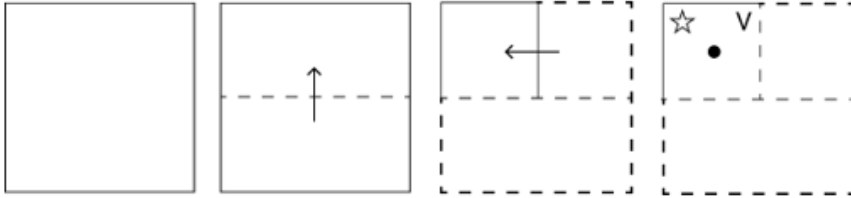
Option 3 ID : 264330342342

Option 4 ID : 264330342341

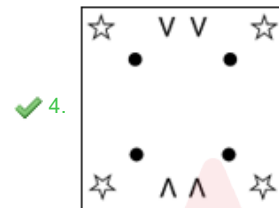
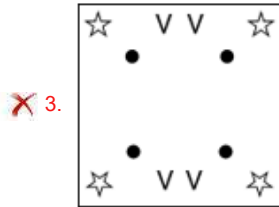
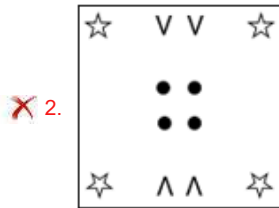
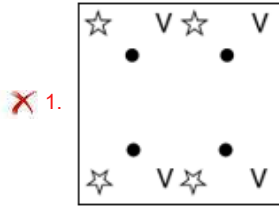
Status : Answered

Chosen Option : 1

Q.15 A square sheet of paper is folded along the dotted line successively along the directions shown and is then punched in the last. How would the paper look when unfolded?



Ans



Question ID : 264330172425

Option 1 ID : 264330676252

Option 2 ID : 264330676254

Option 3 ID : 264330676251

Option 4 ID : 264330676253

Status : Answered

Chosen Option : 4

Q.16 Seven kids, G, H, I, J, K, L and M, are sitting in a straight row facing north. Only two people sit to the right of H. Only three people sit between H and I. J sits to the immediate right of H and to the immediate left of G. K sits to the immediate right of L and is not a neighbour of H.

Who sits second from the extreme left end of the row?

- Ans
- 1. I
 - 2. H
 - 3. K
 - 4. L

Question ID : 26433089504

Option 1 ID : 264330351517

Option 2 ID : 264330351520

Option 3 ID : 264330351518

Option 4 ID : 264330351519

Status : Answered

Chosen Option : 4

Q.17 Select the option that is related to the third word in the same way as the second word is related to the first word. (The words must be considered as meaningful English words and must NOT be related to each other based on the number of letters/number of consonants/vowels in the word)

Hot : Summer :: Cold : ?

- Ans
- 1. Winter
 - 2. August
 - 3. April
 - 4. February

Question ID : 26433069139

Option 1 ID : 264330271069

Option 2 ID : 264330271071

Option 3 ID : 264330271070

Option 4 ID : 264330271068

Status : Answered

Chosen Option : 1

Q.18 Select the set in which the numbers are related in the same way as are the numbers of the following sets.

(NOTE : Operations should be performed on the whole numbers, without breaking down the numbers into its constituent digits. E.g. 13 – Operations on 13 such as adding /deleting /multiplying etc. to 13 can be performed. Breaking down 13 into 1 and 3 and then performing mathematical operations on 1 and 3 is NOT allowed)
(6, 48), (12, 168)

- Ans
- 1. (14, 224)
 - 2. (13, 182)
 - 3. (16, 278)
 - 4. (19, 342)

Question ID : 26433052041

Option 1 ID : 264330203468

Option 2 ID : 264330203466

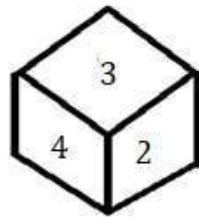
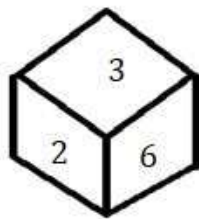
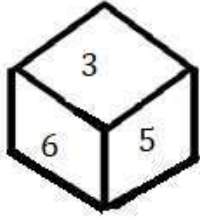
Option 3 ID : 264330203467

Option 4 ID : 264330203469

Status : Answered

Chosen Option : 1

Q.19 Three different positions of the same dice are shown. Find the number on the face opposite the face having '1'.



- Ans
- 1. 6
 - 2. 3
 - 3. 4
 - 4. 2

Question ID : 264330118175

Option 1 ID : 264330464515

Option 2 ID : 264330464517

Option 3 ID : 264330464518

Option 4 ID : 264330464516

Status : Answered

Chosen Option : 2



Q.20 Which of the following option figures will complete the pattern in the figure given below?



Ans

1.



2.



3.



4.

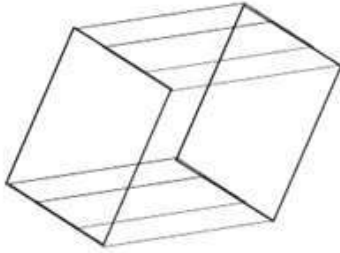


Question ID : 26433089620
Option 1 ID : 264330351981
Option 2 ID : 264330351983
Option 3 ID : 264330351982
Option 4 ID : 264330351984

Status : Answered

Chosen Option : 4

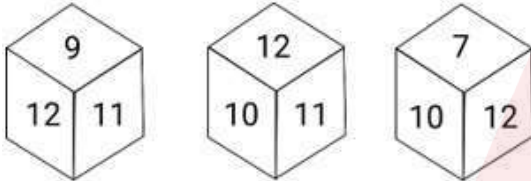
Q.21 How many triangles are there in the given figure?



- Ans 1. 6
 2. 4
 3. 7
 4. 5

Question ID : 26433085578
Option 1 ID : 264330336015
Option 2 ID : 264330336013
Option 3 ID : 264330336016
Option 4 ID : 264330336014
Status : Answered
Chosen Option : 1

Q.22 Six numbers, 7, 8, 9, 10, 11 and 12 are written on different faces of a dice. Three positions of this dice are shown here. Find the number on the face opposite 11.



- Ans 1. 9
 2. 10
 3. 8
 4. 7

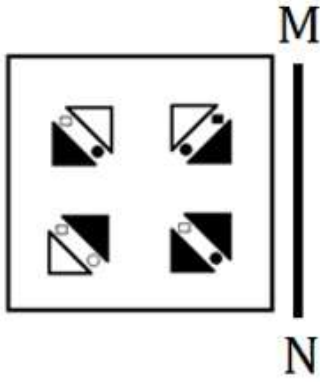
Question ID : 264330106399
Option 1 ID : 264330417899
Option 2 ID : 264330417900
Option 3 ID : 264330417898
Option 4 ID : 264330417897
Status : Answered
Chosen Option : 4

Q.23 Which of the following options will replace the question mark (?) in the given series?
47, 56.4, 67.68, 81.216, ?

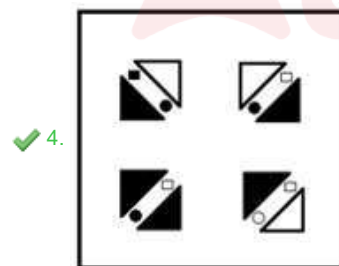
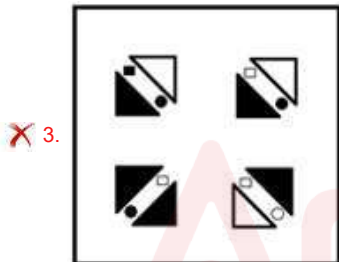
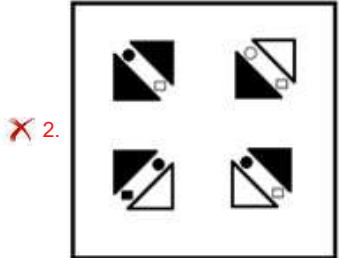
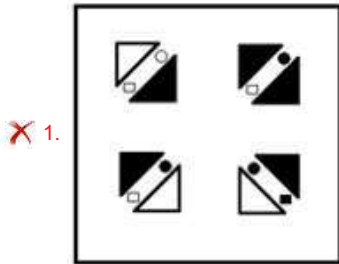
- Ans 1. 97.4592
 2. 9.7632
 3. 86.9544
 4. 91.3462

Question ID : 264330109441
Option 1 ID : 264330430041
Option 2 ID : 264330430044
Option 3 ID : 264330430043
Option 4 ID : 264330430042
Status : Marked For Review
Chosen Option : 1

Q.24 Select the correct mirror image of the given combination when the mirror is placed at 'MN' as shown below.



Ans



Question ID : 264330112990

Option 1 ID : 264330444047

Option 2 ID : 264330444046

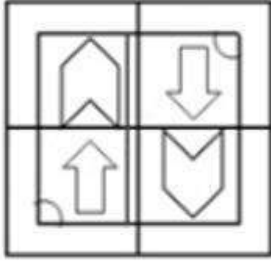
Option 3 ID : 264330444045

Option 4 ID : 264330444048

Status : Answered

Chosen Option : 4

Q.25 Select the option figure which is embedded in the given figure as its part (rotation is NOT allowed).



Ans

- 1.
- 2.
- 3.
- 4.

Question ID : 264330116995
Option 1 ID : 264330460063
Option 2 ID : 264330460062
Option 3 ID : 264330460061
Option 4 ID : 264330460064
Status : Answered
Chosen Option : 4

Section : Numerical Ability

Q.1 A sum of money was lent at 12.5% rate of yearly compound interest for three years. If the present value (i.e. after three years) of the sum of money is ₹13,851, then how much money (in ₹) was lent?

- Ans
- 1. 10000
 - 2. 10278
 - 3. 8728
 - 4. 9728

Question ID : 264330108984
Option 1 ID : 264330428215
Option 2 ID : 264330428216
Option 3 ID : 264330428213
Option 4 ID : 264330428214
Status : Answered
Chosen Option : 4

Q.2 A, B and C can do a piece of work in 40, 60 and 120 days, respectively. In how many days can A do the work if he is assisted by B and C on every third day?

- Ans 1. 30
 2. 20
 3. 25
 4. 35

Question ID : 264330104222
Option 1 ID : 264330409190
Option 2 ID : 264330409189
Option 3 ID : 264330409191
Option 4 ID : 264330409192
Status : Answered
Chosen Option : 1

Q.3 The average of 7.012, 4.018, 6.012, 4.048, and 3.91, is:

- Ans 1. 3.5
 2. 7
 3. 5
 4. 4.5

Question ID : 264330168924
Option 1 ID : 264330662499
Option 2 ID : 264330662501
Option 3 ID : 264330662500
Option 4 ID : 264330662502
Status : Answered
Chosen Option : 3

Q.4 If $184 \div 11.5 = 16$, then $1.84 \div 1.15$ is:

- Ans 1. 1.6
 2. 0.6
 3. 1.06
 4. 0.16

Question ID : 264330111437
Option 1 ID : 264330437834
Option 2 ID : 264330437833
Option 3 ID : 264330437835
Option 4 ID : 264330437836
Status : Answered
Chosen Option : 1

Q.5 Find the number of lead balls, each 2 cm in diameter, that can be made from a sphere of diameter 20 cm.

- Ans 1. 1000
 2. 150
 3. 1500
 4. 100

Question ID : 264330168564
Option 1 ID : 264330661070
Option 2 ID : 264330661067
Option 3 ID : 264330661068
Option 4 ID : 264330661069
Status : Answered
Chosen Option : 1

Q.6 If the diameter of a solid sphere is 28 cm, its hemisphere will have curved surface area (in cm^2) of:

(Take $\pi = \frac{22}{7}$)

- Ans
- 1. 1731
 - 2. 1844
 - 3. 1232
 - 4. 1764

Question ID : 264330112433
Option 1 ID : 264330441818
Option 2 ID : 264330441817
Option 3 ID : 264330441820
Option 4 ID : 264330441819
Status : Answered
Chosen Option : 3

Q.7 In an election, there were three candidates: Ram, Ramesh and Ganesh. Ram received 48% votes and Ramesh received 36% votes. If the total number of votes polled was 40,000, find the number of votes received by Ganesh.

- Ans
- 1. 6900
 - 2. 7400
 - 3. 6400
 - 4. 7800

Question ID : 264330104289
Option 1 ID : 264330409459
Option 2 ID : 264330409458
Option 3 ID : 264330409457
Option 4 ID : 264330409460
Status : Answered
Chosen Option : 3

Q.8 A table is sold for ₹5,862 with 20% profit. The gain or loss percentage (to one decimal place) if it had been sold at ₹5,000, is:

- Ans
- 1. 1.5% loss
 - 2. 2.4% profit
 - 3. 2.3% loss
 - 4. 1.6% profit

Question ID : 264330106348
Option 1 ID : 264330417695
Option 2 ID : 264330417694
Option 3 ID : 264330417693
Option 4 ID : 264330417696
Status : Answered
Chosen Option : 3

Q.9 What is the principal on a certain sum of money at 5% per annum for $2\frac{2}{5}$ years if the amount is ₹1,120?

- Ans
- 1. ₹1,000
 - 2. ₹5,000
 - 3. ₹500
 - 4. ₹2,000

Question ID : 264330182527
Option 1 ID : 264330715900
Option 2 ID : 264330715902
Option 3 ID : 264330715899
Option 4 ID : 264330715901
Status : Answered
Chosen Option : 1

Q.10 If $x : y = 2 : 3$, $y : z = 4 : 7$ and $z : w = 7 : 3$, then $x : y : z : w$ is:

- Ans
- 1. 12 : 8 : 21 : 9
 - 2. 8 : 4 : 21 : 9
 - 3. 8 : 12 : 21 : 9
 - 4. 4 : 21 : 9 : 8

Question ID : 264330106076
Option 1 ID : 264330416608
Option 2 ID : 264330416605
Option 3 ID : 264330416606
Option 4 ID : 264330416607
Status : Answered
Chosen Option : 3

Q.11 Simplify $\frac{7 \div (7 \times 7)}{(7 \div 7) \times 7}$.

- Ans
- 1. 1
 - 2. 49
 - 3. $\frac{1}{49}$
 - 4. 7

Question ID : 264330103919
Option 1 ID : 264330407978
Option 2 ID : 264330407980
Option 3 ID : 264330407979
Option 4 ID : 264330407977
Status : Answered
Chosen Option : 3

Q.12 A person spends 80% of his income. His income increases by 30% and his expenditure also increases by 10%. By what percentage will his savings increase?

- Ans
- 1. 90%
 - 2. 110%
 - 3. 104%
 - 4. 98%

Question ID : 264330129402
Option 1 ID : 264330506974
Option 2 ID : 264330506977
Option 3 ID : 264330506976
Option 4 ID : 264330506975
Status : Answered
Chosen Option : 2

Q.13 Ramesh sells an article at a discount of 15% of the marked price and he gains 25%. If the marked price of the article is ₹7,600, then the cost price of the article is:

- Ans
- 1. ₹5,168
 - 2. ₹5,188
 - 3. ₹5,178
 - 4. ₹5,198

Question ID : 264330179637
Option 1 ID : 264330704543
Option 2 ID : 264330704546
Option 3 ID : 264330704544
Option 4 ID : 264330704545
Status : Marked For Review
Chosen Option : 1

Q.14 The number of all prime numbers less than 40 is:

- Ans
- 1. 12
 - 2. 13
 - 3. 11
 - 4. 10

Question ID : 264330104477
Option 1 ID : 264330410210
Option 2 ID : 264330410211
Option 3 ID : 264330410209
Option 4 ID : 264330410212
Status : Answered
Chosen Option : 2

Q.15 A missile travels at 1152 km/h. How much distance (in m) does it travel in one second?

- Ans
- 1. 380
 - 2. 320
 - 3. 340
 - 4. 360

Question ID : 264330122988
Option 1 ID : 264330482016
Option 2 ID : 264330482017
Option 3 ID : 264330482015
Option 4 ID : 264330482018
Status : Answered
Chosen Option : 2

Q.1 Which of the following types of networking is used to connect all the computers within a school or within an office?

- Ans**
- 1. Metropolitan Area Network
 - 2. Personal Area Network
 - 3. Wide Area Network
 - 4. Local Area Network

Question ID : 264330178245
Option 1 ID : 264330699037
Option 2 ID : 264330699038
Option 3 ID : 264330699036
Option 4 ID : 264330699035
Status : Marked For Review
Chosen Option : 2

Q.2 What is the full form of email?

- Ans**
- 1. Express mail
 - 2. Efficient mail
 - 3. Electro mail
 - 4. Electronic mail

Question ID : 264330182023
Option 1 ID : 264330713933
Option 2 ID : 264330713934
Option 3 ID : 264330713931
Option 4 ID : 264330713932
Status : Answered
Chosen Option : 4

Q.3 In MS Excel 365, Which option is typically used to save a new spreadsheet for the first time?

- Ans**
- 1. Save and New
 - 2. Save and Print
 - 3. Save As
 - 4. Close

Question ID : 264330177659
Option 1 ID : 264330696753
Option 2 ID : 264330696754
Option 3 ID : 264330696751
Option 4 ID : 264330696752
Status : Answered
Chosen Option : 1

Q.4 Which of the following is used to select the entire paragraph in MS-Word 365?

- Ans 1. Triple-click
 2. Double-click
 3. Scroll
 4. Single-click

Question ID : 264330175971
Option 1 ID : 264330690181
Option 2 ID : 264330690180
Option 3 ID : 264330690182
Option 4 ID : 264330690179
Status : Answered
Chosen Option : 2

Q.5 The keyboard shortcut _____ is used to create bullets in MS Word 2010.

- Ans 1. Ctrl + Shift + B
 2. Ctrl + Shift + L
 3. Ctrl + Alt + L
 4. Ctrl + Alt + B

Question ID : 264330181073
Option 1 ID : 264330710235
Option 2 ID : 264330710237
Option 3 ID : 264330710236
Option 4 ID : 264330710238
Status : Not Answered
Chosen Option : --

Q.6 Which of the following shortcut key is used to convert the selected font to subscript in MS Word 365?

- Ans 1. Shift + =
 2. Ctrl + +
 3. Ctrl + =
 4. Shift + +

Question ID : 264330179440
Option 1 ID : 264330703765
Option 2 ID : 264330703764
Option 3 ID : 264330703763
Option 4 ID : 264330703766
Status : Not Answered
Chosen Option : --

Q.7 Which of the following options defines the 'Clipboard' in Microsoft Word 365?

- Ans 1. Accessing the internet
 2. Changing font settings
 3. Creating hyperlinks
 4. Storing and managing copied or cut text and objects

Question ID : 264330182787
Option 1 ID : 264330716919
Option 2 ID : 264330716921
Option 3 ID : 264330716922
Option 4 ID : 264330716920
Status : Answered
Chosen Option : 4

Q.8 In MS Excel 365, Which of the following is used to open a save dialog box in MS-Excel?

- Ans
- 1. View -> save
 - 2. Home -> save
 - 3. Data -> save
 - 4. File -> save

Question ID : 264330178258
Option 1 ID : 264330699087
Option 2 ID : 264330699090
Option 3 ID : 264330699088
Option 4 ID : 264330699089
Status : Answered
Chosen Option : 1

Q.9 The thesaurus tool in MS word 365 is used for _____.

- Ans
- 1. finding similar words in the document
 - 2. checking for nouns and verbs
 - 3. checking for synonyms and antonyms
 - 4. finding repeated words in the document

Question ID : 264330182070
Option 1 ID : 264330714121
Option 2 ID : 264330714122
Option 3 ID : 264330714119
Option 4 ID : 264330714120
Status : Marked For Review
Chosen Option : 4

Q.10 In Microsoft Excel 365, which type of sorting places values from smallest to largest?

- Ans
- 1. Ascending order
 - 2. Random order
 - 3. Descending order
 - 4. Alphanumeric order

Question ID : 264330180691
Option 1 ID : 264330708732
Option 2 ID : 264330708733
Option 3 ID : 264330708731
Option 4 ID : 264330708734
Status : Answered
Chosen Option : 1

Constable Executive Male and Female in Delhi Police Examination 2023

Roll Number	
Candidate Name	
Venue Name	iON Digital Zone iDZ 1 Sector 62
Exam Date	30/11/2023
Exam Time	12:00 PM - 1:30 PM
Subject	Constable Executive Male and Female in Delhi Police Examination 2023

Section : General Knowledge

Q.1 A 20-page autobiography, 'Waiting for a Visa', is written by _____, which is about his experiences with untouchability.

- Ans
- 1. Jyotiba Phule
 - 2. Gopal Krishna Gokhale
 - 3. Bhimrao Ramji Ambedkar
 - 4. Mahatma Gandhi

Question ID : 264330112856
Option 1 ID : 264330443512
Option 2 ID : 264330443511
Option 3 ID : 264330443509
Option 4 ID : 264330443510
Status : Answered
Chosen Option : 3

Q.2 Terekhol, Chapora, Mapusa, Sal, Zuari etc. are the major rivers of which state?

- Ans
- 1. Telangana
 - 2. Goa
 - 3. Chhattisgarh
 - 4. Gujarat

Question ID : 264330113532
Option 1 ID : 264330446215
Option 2 ID : 264330446213
Option 3 ID : 264330446216
Option 4 ID : 264330446214
Status : Marked For Review
Chosen Option : 3

Q.3 Which of the below mentioned items are NOT the part of revenue expenditure as per government budget?

- Ans
- 1. Infrastructural Development Expenditure
 - 2. Salaries and Pensions
 - 3. Subsidies
 - 4. Interest payments

Question ID : 264330130650
Option 1 ID : 264330511713
Option 2 ID : 264330511714
Option 3 ID : 264330511712
Option 4 ID : 264330511711
Status : Answered
Chosen Option : 3

Q.4 Which of the following Constitutional Amendment Acts of the Indian Constitution facilitated the appointment of the same person as governor for two or more states?

- Ans
- 1. 7th
 - 2. 5th
 - 3. 8th
 - 4. 10th

Question ID : 264330120185
Option 1 ID : 264330470996
Option 2 ID : 264330470995
Option 3 ID : 264330470997
Option 4 ID : 264330470998
Status : Not Answered
Chosen Option : --

Q.5 Choose the correct group of greenhouse gases.

- Ans
- 1. CH₄, O₂, CO₂, N₂
 - 2. CH₄, O₂, CO₂, O₃
 - 3. CH₄, N₂O, CO₂, O₃
 - 4. H₂, O₂, CO₂, N₂

Question ID : 264330111899
Option 1 ID : 264330439682
Option 2 ID : 264330439684
Option 3 ID : 264330439681
Option 4 ID : 264330439683
Status : Answered
Chosen Option : 3

Q.6 In which year did India's 'National Food for Work Programme' begin?

- Ans
- 1. 2003
 - 2. 2002
 - 3. 2004
 - 4. 2000

Question ID : 264330130598
Option 1 ID : 264330511505
Option 2 ID : 264330511504
Option 3 ID : 264330511506
Option 4 ID : 264330511503
Status : Not Answered
Chosen Option : --

Q.7 Which of the following was NOT a disadvantage of the green revolution?

- Ans
- 1. High use of fertilisers and pesticides resulted in health illnesses.
 - 2. Most of the crops introduced during green revolution were intensive crops.
 - 3. It promoted extensive use of chemicals.
 - 4. It reduced India's import of food grains

Question ID : 264330120894
Option 1 ID : 264330473794
Option 2 ID : 264330473793
Option 3 ID : 264330473792
Option 4 ID : 264330473791
Status : Answered
Chosen Option : 4

Q.8 Terraces that are level on opposite sides of the valley are referred to as _____ terraces.

- Ans
- 1. horizontal
 - 2. paired
 - 3. symmetrical
 - 4. triangular

Question ID : 264330131744
Option 1 ID : 264330516075
Option 2 ID : 264330516077
Option 3 ID : 264330516076
Option 4 ID : 264330516078
Status : Answered
Chosen Option : 1

Q.9 Which of these festivals commemorates the resurrection of Jesus from the dead?

- Ans
- 1. Good Friday
 - 2. New Year
 - 3. Christmas
 - 4. Easter

Question ID : 264330109312
Option 1 ID : 264330429527
Option 2 ID : 264330429525
Option 3 ID : 264330429526
Option 4 ID : 264330429528
Status : Answered
Chosen Option : 4

Q.10 Rural Self-Employment Training Institute is an initiative of which Ministry of the Government of India?

- Ans
- 1. Ministry of Agriculture
 - 2. Ministry of Rural Development
 - 3. Ministry of Labour and Employment
 - 4. Ministry of Finance

Question ID : 264330138078
Option 1 ID : 264330540921
Option 2 ID : 264330540920
Option 3 ID : 264330540922
Option 4 ID : 264330540919
Status : Answered
Chosen Option : 2

Q.11 Which of the following statements is correct with respect to the Attorney General of India?

- Ans**
- 1. He/She can participate in sessions of the parliament.
 - 2. He/She can vote in the Lok Sabha during the passage of confidence motion and no-confidence motion.
 - 3. He/She cannot participate in joint sitting of the parliament.
 - 4. He/She does not enjoy any immunity or privileges as compared to members of the parliament.

Question ID : 264330177749

Option 1 ID : 264330697103

Option 2 ID : 264330697104

Option 3 ID : 264330697105

Option 4 ID : 264330697106

Status : **Not Attempted and Marked For Review**

Chosen Option : --

Q.12 Consider the below mentioned statements and select the correct option with respect to the Indian folk and tribal dance forms:

- i) Matki is the folk dance of Assam.
- ii) Thang Ta is the folk dance of Manipur.
- iii) Fugdi is the folk dance of Goa.

- Ans**
- 1. Only (ii) is right.
 - 2. Both (i) and (ii) are right.
 - 3. Both (ii) and (iii) are right.
 - 4. Only (i) is right.

Question ID : 264330181381

Option 1 ID : 264330711449

Option 2 ID : 264330711448

Option 3 ID : 264330711450

Option 4 ID : 264330711447

Status : **Answered**

Chosen Option : 3

Q.13 The students in a physics lab have been asked to measure the amount of electric current in a circuit. Which device should they use?

- Ans**
- 1. Altimeter
 - 2. Ammeter
 - 3. Ohmmeter
 - 4. Voltmeter

Question ID : 264330177007

Option 1 ID : 264330694226

Option 2 ID : 264330694223

Option 3 ID : 264330694225

Option 4 ID : 264330694224

Status : **Answered**

Chosen Option : 2

Q.14 Which American President has written 'Dreams from My Father', an autobiography?

- Ans
- 1. George Bush
 - 2. John Kennedy
 - 3. Barack Obama
 - 4. George Washington

Question ID : 26433086906
Option 1 ID : 264330341265
Option 2 ID : 264330341268
Option 3 ID : 264330341267
Option 4 ID : 264330341266
Status : Answered
Chosen Option : 3

Q.15 Which Article of the Constitution of India mentions that the state shall make effective provision for securing public assistance in cases of unemployment, old age, sickness and disablement?

- Ans
- 1. Article 45
 - 2. Article 47
 - 3. Article 39
 - 4. Article 41

Question ID : 264330180882
Option 1 ID : 264330709493
Option 2 ID : 264330709494
Option 3 ID : 264330709491
Option 4 ID : 264330709492
Status : Not Answered
Chosen Option : --

Q.16 In the game of javelin throw the weight of Javelin for women is:

- Ans
- 1. 600 gm
 - 2. 800 gm
 - 3. 700 gm
 - 4. 825 gm

Question ID : 264330112521
Option 1 ID : 264330442169
Option 2 ID : 264330442171
Option 3 ID : 264330442172
Option 4 ID : 264330442170
Status : Not Answered
Chosen Option : --

Q.17 प्रसिद्ध कलाकार तीजन बाई का संबंध निम्नलिखित में से किससे है?

- Ans
- 1. पंडवानी
 - 2. टिप्पनी
 - 3. कालबेलिया
 - 4. भवाई

Question ID : 264330110436
Option 1 ID : 264330434021
Option 2 ID : 264330434024
Option 3 ID : 264330434022
Option 4 ID : 264330434023
Status : Not Answered
Chosen Option : --

Q.18 Liberalisation is a part of _____ reforms.

- Ans
- 1. social
 - 2. political
 - 3. land
 - 4. economic

Question ID : 264330110192
Option 1 ID : 264330433045
Option 2 ID : 264330433048
Option 3 ID : 264330433046
Option 4 ID : 264330433047
Status : Answered
Chosen Option : 2

Q.19 The victory of the _____ marked the foundation stone of the Delhi Sultanate in India.

- Ans
- 1. Afghans
 - 2. Arabs
 - 3. Persians
 - 4. Turks

Question ID : 264330114825
Option 1 ID : 264330451387
Option 2 ID : 264330451385
Option 3 ID : 264330451388
Option 4 ID : 264330451386
Status : Answered
Chosen Option : 4

Q.20 Goods and services that are provided by the government to all the people and whose consumption is not rivalrous are known as:

- Ans
- 1. public goods
 - 2. final goods
 - 3. private goods
 - 4. intermediate goods

Question ID : 264330111566
Option 1 ID : 264330438350
Option 2 ID : 264330438352
Option 3 ID : 264330438349
Option 4 ID : 264330438351
Status : Answered
Chosen Option : 1

Q.21 Excessive use of pesticides, insecticides and inorganic fertilisers is not good for human health. This is due to the phenomena called:

- Ans
- 1. biomagnification
 - 2. intoxication
 - 3. biotransformation
 - 4. biodilution

Question ID : 264330181673
Option 1 ID : 264330712577
Option 2 ID : 264330712575
Option 3 ID : 264330712578
Option 4 ID : 264330712576
Status : Answered
Chosen Option : 2

Q.22 Padma Bhushan and Sangeet Natak Akademi award winner Rukmini Devi Arundale was an exponent of _____ .

- Ans 1. Bharatanatyam
 2. Kathakali
 3. Kathak
 4. Sattriya

Question ID : 264330111984
Option 1 ID : 264330440022
Option 2 ID : 264330440024
Option 3 ID : 264330440023
Option 4 ID : 264330440021
Status : Answered
Chosen Option : 1

Q.23 Which of the following structures stores carbohydrates?

- Ans 1. Aleuroplast
 2. Elaioplast
 3. Amyloplast
 4. Chloroplast

Question ID : 264330113330
Option 1 ID : 264330445407
Option 2 ID : 264330445408
Option 3 ID : 264330445406
Option 4 ID : 264330445405
Status : Not Answered
Chosen Option : --

Q.24 Who among the following Gupta emperors held the title of Vikramaditya?

- Ans 1. Chandragupta I
 2. Skandagupta
 3. Chandragupta II
 4. Budhagupta

Question ID : 264330182693
Option 1 ID : 264330716545
Option 2 ID : 264330716543
Option 3 ID : 264330716546
Option 4 ID : 264330716544
Status : Answered
Chosen Option : 3

Q.25 Who among the following received the National Award for 'Best Music Direction' in September 2022 for his song 'Marange Toh Vahin Jaa Kar' in the documentary film '1232 KMs'?

- Ans 1. Vishal Bharadwaj
 2. Swanand Kirkire
 3. Amit Trivedi
 4. Ajay Atul

Question ID : 264330113238
Option 1 ID : 264330445037
Option 2 ID : 264330445039
Option 3 ID : 264330445038
Option 4 ID : 264330445040
Status : Not Answered
Chosen Option : --

Q.26 After which infamous incident of 1919 was the Hunter Commission appointed?

- Ans
- 1. Indian educational reforms
 - 2. Kheda mill strike
 - 3. Jallianwala Bagh massacre
 - 4. Komagata Maru

Question ID : 264330114858
Option 1 ID : 264330451517
Option 2 ID : 264330451518
Option 3 ID : 264330451520
Option 4 ID : 264330451519
Status : Answered
Chosen Option : 3

Q.27 The first National Winter Games were hosted by _____ .

- Ans
- 1. Gulmarg
 - 2. Manali
 - 3. Srinagar
 - 4. Auli

Question ID : 264330132534
Option 1 ID : 264330519231
Option 2 ID : 264330519232
Option 3 ID : 264330519234
Option 4 ID : 264330519233
Status : Answered
Chosen Option : 1

Q.28 The Statue of Unity is located at the bank of which of these rivers?

- Ans
- 1. Narmada
 - 2. Krishna
 - 3. Yamuna
 - 4. Ganga

Question ID : 264330109321
Option 1 ID : 264330429563
Option 2 ID : 264330429561
Option 3 ID : 264330429562
Option 4 ID : 264330429564
Status : Answered
Chosen Option : 1

Q.29 भारत के संविधान के निम्नलिखित में से किस भाग को 'भारतीय संविधान की अंतरात्मा' के रूप में संदर्भित किया गया है?

- Ans
- 1. केंद्र-राज्य संबंध
 - 2. मौलिक कर्तव्य
 - 3. मौलिक अधिकार
 - 4. नागरिकता

Question ID : 264330133042
Option 1 ID : 264330521222
Option 2 ID : 264330521220
Option 3 ID : 264330521219
Option 4 ID : 264330521221
Status : Answered
Chosen Option : 3

Q.30 मोहनजोदड़ो नगर नियोजन में निम्नलिखित में से किस प्रकार के पैटर्न का पालन किया गया था?

- Ans
- 1. वृत्तीय
 - 2. आयताकार
 - 3. जाल
 - 4. बेलनाकार

Question ID : 264330106231
Option 1 ID : 264330417227
Option 2 ID : 264330417228
Option 3 ID : 264330417225
Option 4 ID : 264330417226
Status : Answered
Chosen Option : 2

Q.31 Which ethnic group is the largest in China, accounting for over 90% of the population?

- Ans
- 1. Uighur
 - 2. Zhuang
 - 3. Manchu
 - 4. Han

Question ID : 264330179300
Option 1 ID : 264330703203
Option 2 ID : 264330703206
Option 3 ID : 264330703205
Option 4 ID : 264330703204
Status : Answered
Chosen Option : 2

Q.32 How many gold medals has the Indian Hockey team won in the Olympics till 2023?

- Ans
- 1. 11
 - 2. 7
 - 3. 8
 - 4. 10

Question ID : 264330176748
Option 1 ID : 264330693210
Option 2 ID : 264330693209
Option 3 ID : 264330693207
Option 4 ID : 264330693208
Status : Answered
Chosen Option : 2

Q.33 Under Liberalisation in 1991, several foreign exchange reforms were initiated. In this context, which of the following is true for devaluation of domestic currency?

- Ans
- 1. Fixing the domestic currency to all foreign currency
 - 2. Lowering the value of foreign currency in relation to domestic currency
 - 3. Increasing value of domestic currency in relation to foreign currency
 - 4. Lowering the value of domestic currency in relation to foreign currency

Question ID : 264330109130
Option 1 ID : 264330428800
Option 2 ID : 264330428797
Option 3 ID : 264330428799
Option 4 ID : 264330428798
Status : Answered
Chosen Option : 4

Q.34 The All India Trade Union Congress worked for the improvement of the workers' working and living conditions. One of the main leaders of this was _____.

- Ans
- 1. Jyotirao Phule
 - 2. MN Roy
 - 3. GB Pant
 - 4. MG Ranade

Question ID : 264330114868
Option 1 ID : 264330451560
Option 2 ID : 264330451557
Option 3 ID : 264330451559
Option 4 ID : 264330451558
Status : Answered
Chosen Option : 4

Q.35 From which of the following countries has 'advisory jurisdiction of the Supreme Court' been adopted in the Constitution of India?

- Ans
- 1. Cuba
 - 2. Canada
 - 3. Germany
 - 4. Portugal

Question ID : 264330133048
Option 1 ID : 264330521244
Option 2 ID : 264330521245
Option 3 ID : 264330521243
Option 4 ID : 264330521246
Status : Answered
Chosen Option : 2

Q.36 Who among the following was the Secretary of State of India and a member of the Cabinet Mission sent to India by the British Government in 1946?

- Ans
- 1. John Simon
 - 2. Stafford Cripps
 - 3. Lord Irwin
 - 4. Lord Pethick-Lawrence

Question ID : 264330183101
Option 1 ID : 264330718136
Option 2 ID : 264330718137
Option 3 ID : 264330718138
Option 4 ID : 264330718139
Status : Answered
Chosen Option : 2

Q.37 Which Article of the Constitution of India debars the courts to inquire into the proceedings of the State Legislature?

- Ans
- 1. Article 209
 - 2. Article 211
 - 3. Article 210
 - 4. Article 212

Question ID : 26433069860
Option 1 ID : 264330273944
Option 2 ID : 264330273946
Option 3 ID : 264330273945
Option 4 ID : 264330273947
Status : Not Answered
Chosen Option : --

Q.38 Which of the following statements are correct regarding the tribal Festival Medaram Jathara?

- A. This is the largest tribal festival of India.
- B. This festival is celebrated by the Koya community of Telangana.
- C. This festival is celebrated once in two years in the month of 'Magha' (February) on the full moon day.

- Ans
- 1. A,B and C
 - 2. B and C only
 - 3. A and C only
 - 4. A and B only

Question ID : 264330119835
Option 1 ID : 264330469615
Option 2 ID : 264330469616
Option 3 ID : 264330469617
Option 4 ID : 264330469618
Status : Answered
Chosen Option : 3

Q.39 With reference to the travellers who visited India, who among the following was from Portugal?

- Ans
- 1. François Bernier
 - 2. Nicolo Conti
 - 3. Ibn Batuta
 - 4. Duarte Barbosa

Question ID : 264330119771
Option 1 ID : 264330469360
Option 2 ID : 264330469362
Option 3 ID : 264330469361
Option 4 ID : 264330469359
Status : Answered
Chosen Option : 4

Q.40 Of which state was Mirza Wajid Ali Shah the king in 1856, when it was annexed into the British Empire in India under the doctrine of lapse policy?

- Ans
- 1. Nagpur
 - 2. Satara
 - 3. Jhansi
 - 4. Awadh

Question ID : 264330113574
Option 1 ID : 264330446383
Option 2 ID : 264330446381
Option 3 ID : 264330446382
Option 4 ID : 264330446384
Status : Answered
Chosen Option : 4

Q.41 The Konkan Railway line passes through which of the following groups of states?

- Ans
- 1. Madhya Pradesh, Goa and Karnataka
 - 2. Maharashtra, Goa and Telangana
 - 3. Maharashtra, Goa and Karnataka
 - 4. Maharashtra, Gujarat and Karnataka

Question ID : 264330178721
Option 1 ID : 264330700914
Option 2 ID : 264330700913
Option 3 ID : 264330700911
Option 4 ID : 264330700912
Status : Answered
Chosen Option : 3

Q.42 Which Five-Year Plan was formulated by governments of two political parties?

- Ans
- 1. Eighth Five-Year Plan
 - 2. Sixth Five-Year Plan
 - 3. Fifth Five-Year Plan
 - 4. Ninth Five-Year Plan

Question ID : 264330111740
Option 1 ID : 264330439047
Option 2 ID : 264330439046
Option 3 ID : 264330439045
Option 4 ID : 264330439048
Status : Answered
Chosen Option : 1

Q.43 मनुष्य इतिहास में किस काल से खाद्य उत्पादक बना?

- Ans
- 1. नवपाषाण युग
 - 2. मध्यपाषाण युग
 - 3. पुरापाषाण युग
 - 4. ताम्रपाषाण युग

Question ID : 264330119715
Option 1 ID : 264330469136
Option 2 ID : 264330469135
Option 3 ID : 264330469137
Option 4 ID : 264330469138
Status : Answered
Chosen Option : 1

Q.44 पूर्ण रूप से भारतीय अक्षत वनस्पति को स्थानिक या देशज प्रजाति कहा जाता है, जबकि जो वनस्पतियां भारत के बाहर से आती हैं, उन्हें _____ कहा जाता है।

- Ans
- 1. स्थानीय प्रजाति
 - 2. विदेशज प्रजाति
 - 3. गैर-स्थानीय प्रजाति
 - 4. लुप्तप्राय प्रजाति

Question ID : 264330174353
Option 1 ID : 264330683831
Option 2 ID : 264330683832
Option 3 ID : 264330683834
Option 4 ID : 264330683833
Status : Answered
Chosen Option : 2

Q.45 The Dancer Couple Dhananjayans were awarded the Rashtriya Kalidas Samman Award (2019-2020) for their contribution to which Indian dance form?

- Ans
- 1. Mohiniyattam
 - 2. Kathak
 - 3. Bharatanatyam
 - 4. Kuchipudi

Question ID : 264330120414
Option 1 ID : 264330471910
Option 2 ID : 264330471909
Option 3 ID : 264330471907
Option 4 ID : 264330471908
Status : Answered
Chosen Option : 3

Q.46 Which of the following is the correct statement about the directive principles of state policy?

- Ans
- 1. Articles 12-35 of the constitution of India deals with directive principles.
 - 2. Articles 36-51 of the constitution of India deals with directive principles.
 - 3. Articles 62-71 of the constitution of India deals with directive principles.
 - 4. Articles 52-62 of the constitution of India deals with directive principles.

Question ID : 264330118539
Option 1 ID : 264330465557
Option 2 ID : 264330465558
Option 3 ID : 264330465560
Option 4 ID : 264330465559
Status : Answered
Chosen Option : 2

Q.47 Surat, Navsari and Bhavnagar are known for their involvement in which industry?

- Ans
- 1. Software industry
 - 2. Iron and steel industry
 - 3. Automobile industry
 - 4. Diamond industry

Question ID : 264330183063
Option 1 ID : 264330717986
Option 2 ID : 264330717985
Option 3 ID : 264330717987
Option 4 ID : 264330717984
Status : Answered
Chosen Option : 4

Q.48 Which scheme was started in 2000 for additional central assistance to be given to states for basic services such as primary health, primary education, rural shelter, etc.?

- Ans
- 1. Swarnajayanti Gram Swarojgar Yojana
 - 2. Prime Minister Rojgar Yojana
 - 3. Rural Employment Generation Programme
 - 4. Pradhan Mantri Gramodaya Yojana

Question ID : 26433082172

Option 1 ID : 264330322522

Option 2 ID : 264330322523

Option 3 ID : 264330322521

Option 4 ID : 264330322524

Status : **Not Attempted and Marked For Review**

Chosen Option : --

Q.49 In which year did the Indian Badminton team create history by winning the Thomas Cup tournament?

- Ans
- 1. 2020
 - 2. 2019
 - 3. 2022
 - 4. 2021

Question ID : 264330119272

Option 1 ID : 264330467375

Option 2 ID : 264330467377

Option 3 ID : 264330467378

Option 4 ID : 264330467376

Status : **Answered**

Chosen Option : 3

Q.50 The movie RRR has recently been honoured with the prestigious Golden Globe award for the Best Original Song for the track 'Natu Natu'. Who are the singers of this song?

- Ans
- 1. Rahul Sipligunj and Kaala Bhairava
 - 2. Silambarasan TR and Vineeth Sreenivasan
 - 3. KJ Yesudas and Anirudh Ravichander
 - 4. Shankar Mahadevan and Rajesh Krishnan

Question ID : 264330130892

Option 1 ID : 264330512681

Option 2 ID : 264330512679

Option 3 ID : 264330512682

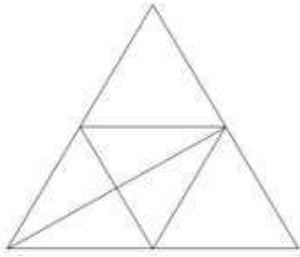
Option 4 ID : 264330512680

Status : **Answered**

Chosen Option : 2

Section : Reasoning

Q.1 How many triangles are there in the given figure?



- Ans
- 1. 13
 - 2. 12
 - 3. 14
 - 4. 11

Question ID : 26433085672

Option 1 ID : 264330336389

Option 2 ID : 264330336390

Option 3 ID : 264330336392

Option 4 ID : 264330336391

Status : Answered

Chosen Option : 1

Q.2 Select the set in which the numbers are related in the same way as are the numbers of the following sets.

(NOTE : Operations should be performed on the whole numbers, without breaking down the numbers into its constituent digits. E.g. 13 – Operations on 13 such as adding /deleting /multiplying etc. to 13 can be performed. Breaking down 13 into 1 and 3 and then performing mathematical operations on 1 and 3 is not allowed.)

(40, 8, 24)
(60, 12, 36)

- Ans
- 1. (70, 14, 44)
 - 2. (80, 14, 42)
 - 3. (70, 14, 42)
 - 4. (80, 14, 44)

Question ID : 264330175035

Option 1 ID : 264330686518

Option 2 ID : 264330686517

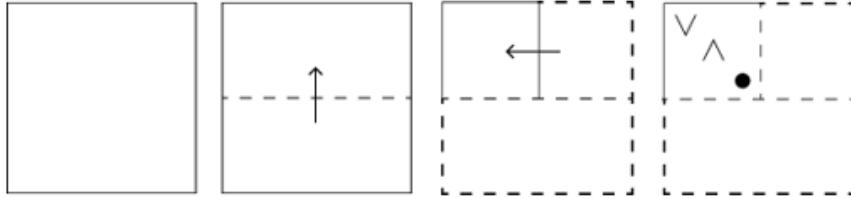
Option 3 ID : 264330686515

Option 4 ID : 264330686516

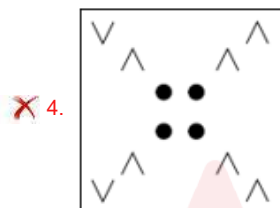
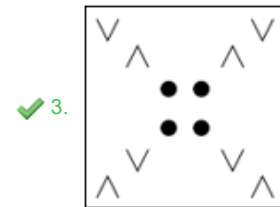
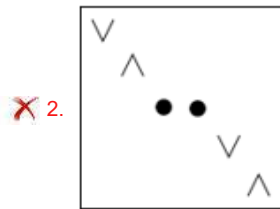
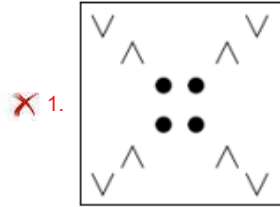
Status : Answered

Chosen Option : 3

Q.3 A square sheet of paper is folded along the dotted line successively along the directions shown and is then punched in the last. How would the paper look when unfolded?



Ans



Question ID : 264330172430

Option 1 ID : 264330676272

Option 2 ID : 264330676271

Option 3 ID : 264330676274

Option 4 ID : 264330676273

Status : Answered

Chosen Option : 3

Q.4 Which of the following terms will replace the question mark (?) in the given series?
YXQM, UUOL, QRMK, MOKJ, ?

Ans ✓ 1. ILII

✗ 2. OLJI

✗ 3. NKII

✗ 4. INJI

Question ID : 264330102171

Option 1 ID : 264330401149

Option 2 ID : 264330401151

Option 3 ID : 264330401152

Option 4 ID : 264330401150

Status : Answered

Chosen Option : 1

Q.5 Select the correct mirror image of the given combination when the mirror is placed at 'XY' as shown below.



- Ans
- 1. B T 2 1 0 B 1 C
 - 2. R 1 5 7 Q R J C
 - 3. R 1 5 7 Q R J C
 - 4. C J R Q 7 5 1 R

Question ID : 264330129694

Option 1 ID : 264330508144

Option 2 ID : 264330508142

Option 3 ID : 264330508143

Option 4 ID : 264330508145

Status : Answered

Chosen Option : 2

Q.6 Which figure should replace the question mark (?) if the following series were to be continued?

C	O	T	T	3	↑	3	↑	T	T	O	X	O	X	T	
3		V	V		O	O		V	V		↑	↑		V	?
	↑			C			X			3			6		

- Ans
- 1.

T	↑	6
V		X
		O
 - 2.

6	↑	O
V		X
		T
 - 3.

T	O	X
V		6
		↑
 - 4.

T	V	6
X		↑
		O

Question ID : 264330103885

Option 1 ID : 264330407843

Option 2 ID : 264330407841

Option 3 ID : 264330407844

Option 4 ID : 264330407842

Status : Answered

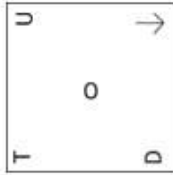
Chosen Option : 1

Q.7 Which figure should replace the question mark (?) if the following series were to be continued?

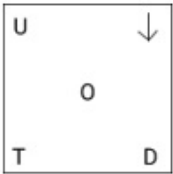
U	↓	□	→	←	←	←	↑	□	□	↓	
	Z	♡		B		S		3			?
T	D	←	←	□	←	□	↑	□	↑	□	

Ans

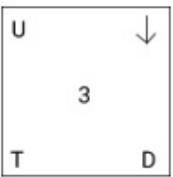
✓ 1.



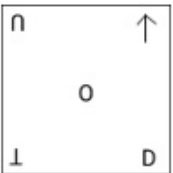
✗ 2.



✗ 3.



✗ 4.



Question ID : 264330103880

Option 1 ID : 264330407823

Option 2 ID : 264330407824

Option 3 ID : 264330407821

Option 4 ID : 264330407822

Status : Answered

Chosen Option : 1

Q.8 Six dogs - P, Q, R, S, T and U - were sitting around a circular table, equidistant to one another. They were facing the centre of the table. Q was exactly between P and S. U was to the immediate right of R. T was to the immediate left of S. Who among the following was sitting third to the left of S?

Ans ✓ 1. R

✗ 2. P

✗ 3. U

✗ 4. Q

Question ID : 26433087006

Option 1 ID : 264330341667

Option 2 ID : 264330341665

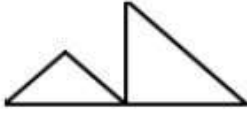
Option 3 ID : 264330341668

Option 4 ID : 264330341666

Status : Answered

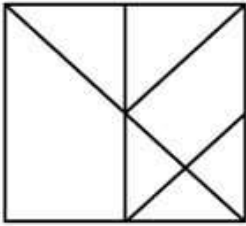
Chosen Option : 1

Q.9 Select the option in which the given figure is embedded (rotation is NOT allowed).

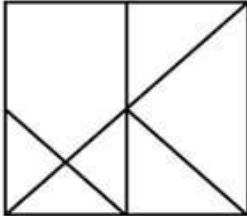


Ans

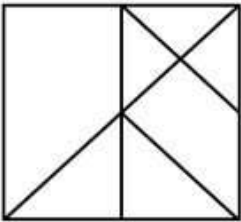
✗ 1.



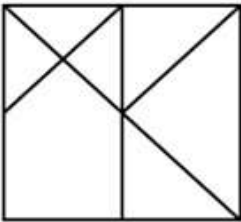
✓ 2.



✗ 3.



✗ 4.



Question ID : 264330106327

Option 1 ID : 264330417612

Option 2 ID : 264330417611

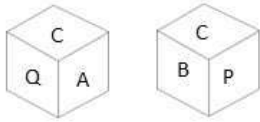
Option 3 ID : 264330417609

Option 4 ID : 264330417610

Status : Answered

Chosen Option : 2

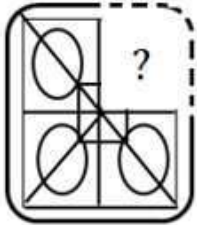
Q.10 Six letters A, B, C, P, Q and R are written on different faces of a dice. Two positions of this dice are shown in the figure. Find the letter on the face opposite to A.



- Ans
- 1. B
 - 2. Q
 - 3. R
 - 4. P

Question ID : 264330109206
 Option 1 ID : 264330429103
 Option 2 ID : 264330429101
 Option 3 ID : 264330429104
 Option 4 ID : 264330429102
 Status : Answered
 Chosen Option : 4

Q.11 Select the option figure that will replace the question mark (?) in the figure given below to complete the pattern.



- Ans
- 1.
 - 2.
 - 3.
 - 4.

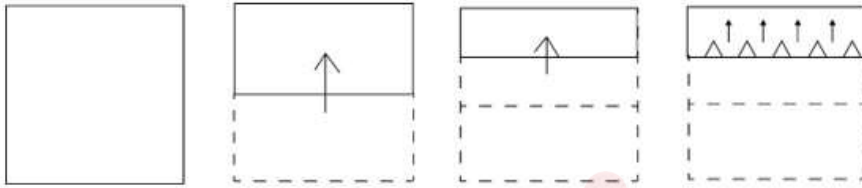
Question ID : 264330131105
 Option 1 ID : 264330513534
 Option 2 ID : 264330513533
 Option 3 ID : 264330513531
 Option 4 ID : 264330513532
 Status : Answered
 Chosen Option : 4

Q.12 Select the option that is related to the third term in the same way as the second term is related to the first term and the sixth term is related to the fifth term.
 $8 : 17 :: 14 : ? :: 20 : 41$

- Ans
- 1. 44
 - 2. 29
 - 3. 30
 - 4. 53

Question ID : 264330101042
 Option 1 ID : 264330396716
 Option 2 ID : 264330396713
 Option 3 ID : 264330396714
 Option 4 ID : 264330396715
 Status : Answered
 Chosen Option : 2

Q.13 The sequence of folding a piece of paper and the manner in which the folded paper is cut are shown in the following figures. How would this paper look when unfolded?

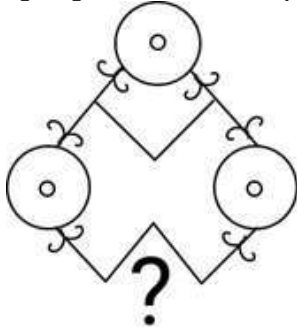


Ans

- 1.
- 2.
- 3.
- 4.

Question ID : 264330118718
 Option 1 ID : 264330466123
 Option 2 ID : 264330466124
 Option 3 ID : 264330466126
 Option 4 ID : 264330466125
 Status : Answered
 Chosen Option : 1

Q.14 Select the figure from the given options that will replace the question mark (?) in the figure given below and complete the pattern.



Ans

- 1.
- 2.
- 3.
- 4.

Question ID : 264330111714

Option 1 ID : 264330438942

Option 2 ID : 264330438943

Option 3 ID : 264330438941

Option 4 ID : 264330438944

Status : Answered

Chosen Option : 4

Q.15 In a certain code language, 'SENSE' is written as 'GUPGU' and 'PAINT' is written as 'VPKCR'. How will 'KNIFE' be written in that language?

- Ans
- 1. MOKHG
 - 2. GHMPK
 - 3. GHKPM
 - 4. GHOMK

Question ID : 26433087168

Option 1 ID : 264330342309

Option 2 ID : 264330342310

Option 3 ID : 264330342312

Option 4 ID : 264330342311

Status : Answered

Chosen Option : 3

Q.16 Two statements are given followed by two conclusions numbered I and II. Assuming the statements to be true, even if they seem to be at variance from commonly known facts, decide which of the conclusions logically follow(s) from the statements.

Statements:

All Peanuts are Almonds.

All Almonds are Butters.

Conclusions:

I. All Butters are Almonds.

II. All Peanuts are Butters.

- Ans
- 1. Both conclusions I and II follow.
 - 2. Neither conclusion I nor II follows.
 - 3. Only conclusion I follows.
 - 4. Only conclusion II follows.

Question ID : 26433076603

Option 1 ID : 264330300478

Option 2 ID : 264330300479

Option 3 ID : 264330300476

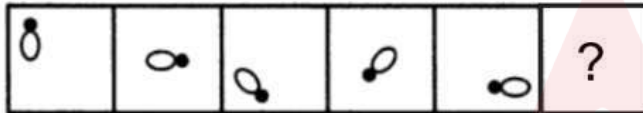
Option 4 ID : 264330300477

Status : Marked For Review

Chosen Option : 4

Q.17 Select the figure from among the given options that can replace the question mark

(?) in the following series.



Ans

- 1.
- 2.
- 3.
- 4.

Question ID : 26433080536

Option 1 ID : 264330316080

Option 2 ID : 264330316077

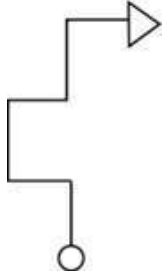
Option 3 ID : 264330316079

Option 4 ID : 264330316078

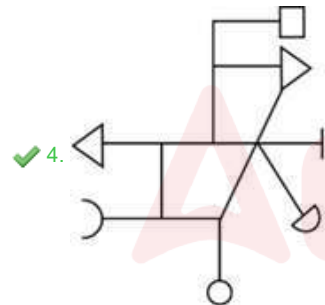
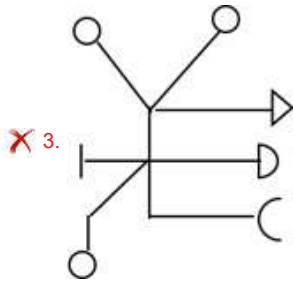
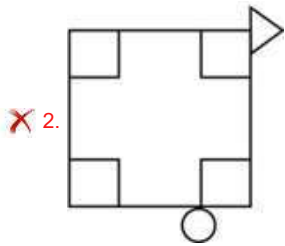
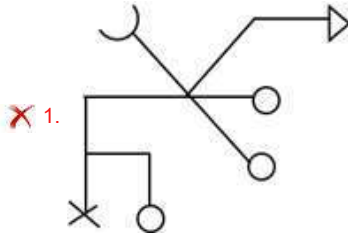
Status : Answered

Chosen Option : 2

Q.18 Select the option in which the given figure is embedded (rotation is NOT allowed).



Ans



Question ID : 264330111674

Option 1 ID : 264330438783

Option 2 ID : 264330438781

Option 3 ID : 264330438784

Option 4 ID : 264330438782

Status : Answered

Chosen Option : 4

Q.19 Select the number from among the given options that can replace the question mark (?) in the following series.

9, 20, 53, 152, 449, ?

Ans 1. 4344

2. 1340

3. 4233

4. 3146

Question ID : 264330109757

Option 1 ID : 264330431306

Option 2 ID : 264330431307

Option 3 ID : 264330431305

Option 4 ID : 264330431308

Status : Answered

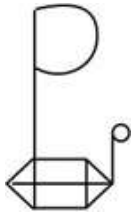
Chosen Option : 2

Q.20 Select the option in which the given figure is embedded (rotation is NOT allowed).

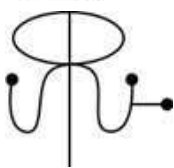


Ans

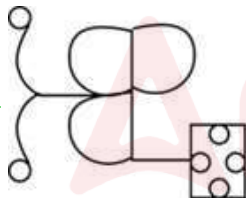
1.



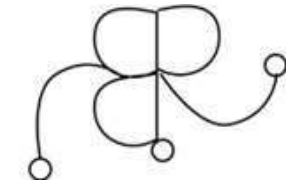
2.



3.



4.



Question ID : 264330111669

Option 1 ID : 264330438763

Option 2 ID : 264330438764

Option 3 ID : 264330438762

Option 4 ID : 264330438761

Status : Answered

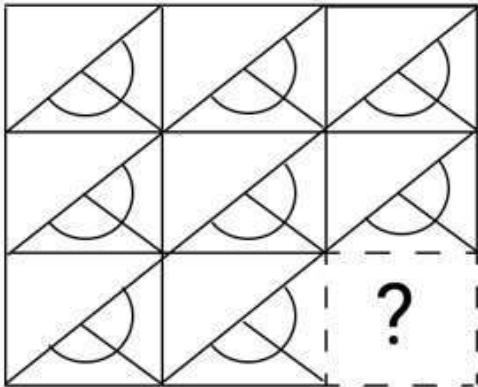
Chosen Option : 3

Q.21 Select the correct combination of mathematical signs to sequentially replace the * signs and to balance the given equation.
 $88 * 4 * 15 * 3 * 1 * 4$

- Ans
- 1. $- + = \times +$
 - 2. $- = \times + +$
 - 3. $+ - = \times +$
 - 4. $+ - \times + =$

Question ID : 26433085727
 Option 1 ID : 264330336609
 Option 2 ID : 264330336611
 Option 3 ID : 264330336612
 Option 4 ID : 264330336610
 Status : Answered
 Chosen Option : 3

Q.22 Select the figure from the options that can replace the question mark (?) and complete the given pattern.



- Ans
- 1.
 - 2.
 - 3.
 - 4.

Question ID : 264330106480
 Option 1 ID : 264330418223
 Option 2 ID : 264330418221
 Option 3 ID : 264330418222
 Option 4 ID : 264330418224
 Status : Answered
 Chosen Option : 4

Q.23 उस विकल्प का चयन करें जो तीसरे शब्द से उसी प्रकार संबंधित है, जिस प्रकार दूसरा शब्द पहले शब्द से संबंधित है!
(शब्दों को अर्थपूर्ण हिंदी शब्दों के रूप में माना जाना चाहिए और शब्द में अक्षरों की संख्या/व्यंजनों की संख्या/स्वरों की संख्या के आधार पर उन्हें एक-दूसरे से संबंधित नहीं किया जाना चाहिए)
संपादक : समाचार पत्र :: नाटककार : ?

- Ans
- 1. डिजाइन
 - 2. भूमिका/किरदार
 - 3. सृजन
 - 4. नाटक

Question ID : 26433082578
Option 1 ID : 264330324145
Option 2 ID : 264330324147
Option 3 ID : 264330324146
Option 4 ID : 264330324148
Status : Answered
Chosen Option : 4

Q.24 Which two signs should be interchanged to make the following equation correct?

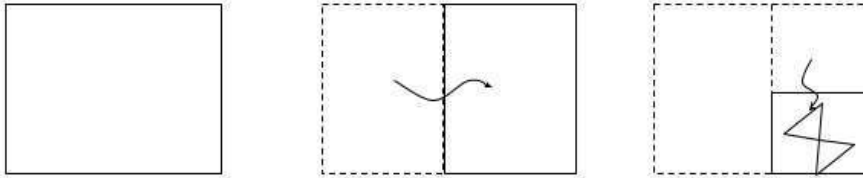
$$59 - 44 \div 11 \times 13 + 2 = 81$$

- Ans
- 1. + and +
 - 2. + and -
 - 3. - and ×
 - 4. + and ×

Question ID : 264330101083
Option 1 ID : 264330396877
Option 2 ID : 264330396880
Option 3 ID : 264330396879
Option 4 ID : 264330396878
Status : Answered
Chosen Option : 4

Adda247

Q.25 A paper is folded and cut as shown below. How will it appear when unfolded?



Ans

- ✗ 1.
- ✓ 2.
- ✗ 3.
- ✗ 4.

Question ID : 264330118715

Option 1 ID : 264330466112

Option 2 ID : 264330466111

Option 3 ID : 264330466113

Option 4 ID : 264330466114

Status : Answered

Chosen Option : 2

Section : Numerical Ability

Q.1 A shopkeeper gains 35% after allowing a discount of 15% on the marked price of an article. Find his profit per cent if the articles are sold at a marked price allowing no discount.

- ✓ 1. 58.82%
- ✗ 2. 65%
- ✗ 3. 60%
- ✗ 4. 62%

Question ID : 264330131833

Option 1 ID : 264330516432

Option 2 ID : 264330516433

Option 3 ID : 264330516431

Option 4 ID : 264330516434

Status : Answered

Chosen Option : 1

Q.2 एक आदमी ने दो अलमारियों को ₹650 प्रत्येक में बेचा, एक पर 30% का लाभ और दूसरी पर 20% की हानि हुई। यदि उसने दोनों अलमारियों को ₹875 प्रत्येक में बेचा होता, तो उसका शुद्ध लाभ/हानि प्रतिशत (निकटतम पूर्णांक तक) कितना होता?

- Ans
- 1. 35% लाभ
 - 2. 42% हानि
 - 3. 33% लाभ
 - 4. 36% हानि

Question ID : 264330106347

Option 1 ID : 264330417689

Option 2 ID : 264330417690

Option 3 ID : 264330417691

Option 4 ID : 264330417692

Status : Answered

Chosen Option : 1

Q.3 The sum of the radius of the base and the height of a solid cylinder is 42 m. If the total surface area of the cylinder is 3696 m^2 , then find its volume.

(Where $\pi = \frac{22}{7}$)

- Ans
- 1. 19240 m^3
 - 2. 17248 m^3
 - 3. 18258 m^3
 - 4. 16445 m^3

Question ID : 264330118148

Option 1 ID : 264330464409

Option 2 ID : 264330464410

Option 3 ID : 264330464407

Option 4 ID : 264330464408

Status : Answered

Chosen Option : 2

Q.4 Meena has ₹20,000 in her savings account. If she spends ₹6,000, what is the decrease in saving as a percentage?

- Ans
- 1. 12%
 - 2. 22%
 - 3. 30%
 - 4. 20%

Question ID : 264330104413

Option 1 ID : 264330409953

Option 2 ID : 264330409955

Option 3 ID : 264330409956

Option 4 ID : 264330409954

Status : Answered

Chosen Option : 3

Q.5 The length of the rectangle is increased by 5% and its breadth is decreased by 5%. The area of the new rectangle is:

- Ans
- 1. decreased by 0.25%
 - 2. decreased by 1%
 - 3. increased by 0.25%
 - 4. neither increased nor decreased

Question ID : 264330109333
Option 1 ID : 264330429611
Option 2 ID : 264330429612
Option 3 ID : 264330429610
Option 4 ID : 264330429609
Status : Answered
Chosen Option : 1

Q.6 Ritika is riding her motorcycle at a speed of 84 km/h. How many metres will Ritika cover in 45 seconds if she rides at the same speed?

- Ans
- 1. 1080
 - 2. 1050
 - 3. 1020
 - 4. 1035

Question ID : 264330122845
Option 1 ID : 264330481449
Option 2 ID : 264330481450
Option 3 ID : 264330481448
Option 4 ID : 264330481447
Status : Answered
Chosen Option : 2

Q.7 If 56 workers earn ₹4,050 in 5 days, how much will 48 workers earn in 14 days?

- Ans
- 1. ₹5,968
 - 2. ₹6,128
 - 3. ₹9,720
 - 4. ₹9,980

Question ID : 264330182585
Option 1 ID : 264330716134
Option 2 ID : 264330716131
Option 3 ID : 264330716132
Option 4 ID : 264330716133
Status : Answered
Chosen Option : 3

Q.8 The sum of two numbers is 72 and their difference is $\frac{1}{9}$ of their sum. Their LCM is:

- Ans
- 1. 120
 - 2. 8
 - 3. 320
 - 4. 160

Question ID : 264330104225
Option 1 ID : 264330409204
Option 2 ID : 264330409201
Option 3 ID : 264330409203
Option 4 ID : 264330409202
Status : Answered
Chosen Option : 4

Q.9 Mr. Singh invests (Simple interest) a sum of ₹1,264 at 5% p.a. in a bank. What is the amount that he will get after 3 years?

- Ans
- 1. ₹2,145.80
 - 2. ₹1,285.80
 - 3. ₹1,453.60
 - 4. ₹1,848.80

Question ID : 264330182520
Option 1 ID : 264330715873
Option 2 ID : 264330715872
Option 3 ID : 264330715874
Option 4 ID : 264330715871
Status : Answered
Chosen Option : 3

Q.10 To wrap a cylinder from all sides, the cloth required to cover the curved area is double the cloth required to cover the flat areas. What is the ratio of the height of the cylinder to the radius of the cylinder?

- Ans
- 1. 2 : 1
 - 2. 1 : 2
 - 3. $1 : \sqrt{2}$
 - 4. $\sqrt{2} : 1$

Question ID : 264330112123
Option 1 ID : 264330440577
Option 2 ID : 264330440578
Option 3 ID : 264330440580
Option 4 ID : 264330440579
Status : Answered
Chosen Option : 1

Q.11 P,Q,R and S are four prime numbers such that their sum equals 45. If it is given that $P < Q < R < S$; then the value of $P^4 + 2P$ is:

- Ans 1. 220
 2. 635
 3. 20
 4. 87

Question ID : 264330111449
Option 1 ID : 264330437884
Option 2 ID : 264330437882
Option 3 ID : 264330437883
Option 4 ID : 264330437881
Status : Not Answered
Chosen Option : --

Q.12 If $x = 0.35$ and $y = \frac{6}{5}$, then the value of $x \times y \div (100x - 30y) \times \left(\frac{y}{2.1}\right) + \frac{6}{y}$ is _____.

- Ans 1. 6.47
 2. 7.46
 3. 4.67
 4. 4.76

Question ID : 264330112061
Option 1 ID : 264330440332
Option 2 ID : 264330440331
Option 3 ID : 264330440330
Option 4 ID : 264330440329
Status : Answered
Chosen Option : 4

Q.13 Ankit is twice as old as Reena, while Reena is three times older than Sanjana. What is the ratio of the ages of Ankit, Reena and Sanjana?

- Ans 1. 8:4:3
 2. 6:3:1
 3. 2:1:3
 4. 1:3:6

Question ID : 264330105973
Option 1 ID : 264330416194
Option 2 ID : 264330416195
Option 3 ID : 264330416193
Option 4 ID : 264330416196
Status : Answered
Chosen Option : 2

Q.14 The population of a village is 8,00,865. If it increases at the rate of 11% per annum, then what was the population of the village 2 years ago?

- Ans
- 1. 4,50,000
 - 2. 6,50,000
 - 3. 8,65,000
 - 4. 5,65,000

Question ID : 264330104525
Option 1 ID : 264330410404
Option 2 ID : 264330410403
Option 3 ID : 264330410402
Option 4 ID : 264330410401
Status : Answered
Chosen Option : 3

Q.15 What is the average of the numbers 15, 27, 34 and 48?

- Ans
- 1. 29
 - 2. 32
 - 3. 33
 - 4. 31

Question ID : 264330131118
Option 1 ID : 264330513585
Option 2 ID : 264330513584
Option 3 ID : 264330513586
Option 4 ID : 264330513583
Status : Answered
Chosen Option : 4

Section : Computer Proficiency

Q.1 Among the following, under which tab will you find the Bullets and Numbering in MS-Word 365?

- Ans
- 1. Page Layout
 - 2. Insert
 - 3. Home
 - 4. References

Question ID : 264330171406
Option 1 ID : 264330672241
Option 2 ID : 264330672240
Option 3 ID : 264330672239
Option 4 ID : 264330672242
Status : Marked For Review
Chosen Option : 1

Q.2 एक नया ई-मेल कम्पोज़ करने की प्रक्रिया में, प्राथमिक प्राप्तकर्ता का ई-मेल एड्रेस इंटर करने का सामान्य स्थान कौन-सा होता है?

- Ans
- 1. ई-मेल का मुख्य भाग (Body of the email)
 - 2. 'CC' फ़ील्ड ('CC' field)
 - 3. सब्जेक्ट लाइन (Subject line)
 - 4. 'To' फ़ील्ड ('To' field)

Question ID : 264330177646
Option 1 ID : 264330696700
Option 2 ID : 264330696702
Option 3 ID : 264330696699
Option 4 ID : 264330696701
Status : Answered
Chosen Option : 4

Q.3 Which of the following keyboard shortcuts helps you copy data in MS Excel 365?

- Ans
- 1. Ctrl + C
 - 2. Ctrl + Y
 - 3. Ctrl + Z
 - 4. Ctrl + X

Question ID : 264330180829
Option 1 ID : 264330709279
Option 2 ID : 264330709281
Option 3 ID : 264330709282
Option 4 ID : 264330709280
Status : Answered
Chosen Option : 1

Q.4 What is the purpose of sorting data in Microsoft Excel 365?

- Ans
- 1. To create charts and graphs
 - 2. To organise data in a specific order based on values
 - 3. To apply formatting to the cells only
 - 4. To calculate averages of the data

Question ID : 264330180690
Option 1 ID : 264330708730
Option 2 ID : 264330708729
Option 3 ID : 264330708727
Option 4 ID : 264330708728
Status : Answered
Chosen Option : 1

Q.5 In Microsoft Word 365, what does the 'B' icon usually represent?

- Ans
- 1. Bold formatting
 - 2. Italic formatting
 - 3. Page break
 - 4. Bullet points

Question ID : 264330180743
Option 1 ID : 264330708939
Option 2 ID : 264330708942
Option 3 ID : 264330708941
Option 4 ID : 264330708940
Status : Answered
Chosen Option : 1

Q.6 Which option in the context menu allows you to paste the copied text with formatting removed in Microsoft Word 365?

- Ans**
- 1. Paste
 - 2. Paste as Plain Text
 - 3. Paste Special
 - 4. Paste as Unformatted Text

Question ID : 264330173578
Option 1 ID : 264330680791
Option 2 ID : 264330680793
Option 3 ID : 264330680792
Option 4 ID : 264330680794
Status : Answered
Chosen Option : 4

Q.7 In MS Excel 365, which of the following is the correct shortcut key used to paste data in MS Excel?

- Ans**
- 1. Ctrl + C
 - 2. Shift + V
 - 3. Alt + V
 - 4. Ctrl + V

Question ID : 264330176694
Option 1 ID : 264330692991
Option 2 ID : 264330692992
Option 3 ID : 264330692994
Option 4 ID : 264330692993
Status : Answered
Chosen Option : 4

Q.8 Which keyboard shortcut is commonly used to create a new blank document in MS Word 365?

- Ans**
- 1. Ctrl + S
 - 2. Ctrl + C
 - 3. Ctrl + O
 - 4. Ctrl + N

Question ID : 264330180854
Option 1 ID : 264330709381
Option 2 ID : 264330709382
Option 3 ID : 264330709380
Option 4 ID : 264330709379
Status : Answered
Chosen Option : 4

Q.9 What does 'ISP' stand for in the context of internet access?

- Ans**
- 1. International Security Protocol
 - 2. Internet System Protocol
 - 3. Internet Service Provider
 - 4. Internet Security Program

Question ID : 264330180668
Option 1 ID : 264330708640
Option 2 ID : 264330708639
Option 3 ID : 264330708641
Option 4 ID : 264330708642
Status : Answered
Chosen Option : 2

Q.10 Which of the following icons are a part of the Design menu in MS Word 365?

- Ans** 1. Icons to change themes, colours, fonts, effects and page borders
 2. Icons for zooming in and out, print layout, switching windows and splitting windows
 3. Icons for spelling and grammar check, thesaurus and word count
 4. Icons to change font size, style, alignment and borders

Question ID : **264330180645**

Option 1 ID : **264330708547**

Option 2 ID : **264330708550**

Option 3 ID : **264330708549**

Option 4 ID : **264330708548**

Status : **Marked For Review**

Chosen Option : **2**



Constable Executive Male and Female in Delhi Police Examination 2023

Roll Number	
Candidate Name	
Venue Name	iON Digital Zone iDZ Kanti
Exam Date	30/11/2023
Exam Time	3:00 PM - 4:30 PM
Subject	Constable Executive Male and Female in Delhi Police Examination 2023

Section : General Knowledge

Q.1 As per Article 118 of the Constitution of India, who presides over the joint sitting of the two houses?

- Ans
- 1. Prime Minister
 - 2. President
 - 3. Chairman
 - 4. Speaker

Question ID : 264330110599
Option 1 ID : 264330434674
Option 2 ID : 264330434673
Option 3 ID : 264330434676
Option 4 ID : 264330434675
Status : Answered
Chosen Option : 2

Q.2 In 1953, who among the following dancers was called to perform for the coronation festivities of Queen Elizabeth (II)?

- Ans
- 1. Sonal Mansingh
 - 2. Shovana Narayan
 - 3. Kumari Kamala
 - 4. Mrinalini Sarabhai

Question ID : 26433086934
Option 1 ID : 264330341378
Option 2 ID : 264330341380
Option 3 ID : 264330341379
Option 4 ID : 264330341377
Status : Answered
Chosen Option : 4

Q.3 The chemical name of baking soda is:

- Ans
- 1. sodium carbonate (Na_2CO_3)
 - 2. sodium citrate ($\text{Na}_3\text{C}_6\text{H}_5\text{O}_7$)
 - 3. sodium hydrogen carbonate (NaHCO_3)
 - 4. calcium hydrogen bicarbonate (CaHCO_3)₂

Question ID : 264330182935
Option 1 ID : 264330717474
Option 2 ID : 264330717475
Option 3 ID : 264330717472
Option 4 ID : 264330717473
Status : Answered
Chosen Option : 3

Q.4 Which among the following is NOT a basic attribute of Dhamma mentioned in the Ashokan edicts?

- Ans
- 1. Truthfulness
 - 2. Compassion
 - 3. Charity
 - 4. Celibacy

Question ID : 264330130540
Option 1 ID : 264330511273
Option 2 ID : 264330511271
Option 3 ID : 264330511272
Option 4 ID : 264330511274
Status : Not Answered
Chosen Option : --

Q.5 What is the ornate mountain-like entrance gateway before entering the premises of temples located in South India called?

- Ans
- 1. Kalasha
 - 2. Jagati
 - 3. Gopuram
 - 4. Garbagriha

Question ID : 264330141825
Option 1 ID : 264330555622
Option 2 ID : 264330555621
Option 3 ID : 264330555619
Option 4 ID : 264330555620
Status : Answered
Chosen Option : 3

Q.6 According to Census 2011, which union territory of India has the lowest population?

- Ans
- 1. Dadra and Nagar Haveli
 - 2. Puducherry
 - 3. Daman and Diu
 - 4. Lakshadweep

Question ID : 264330132740
Option 1 ID : 264330520058
Option 2 ID : 264330520056
Option 3 ID : 264330520055
Option 4 ID : 264330520057
Status : Answered
Chosen Option : 1

Q.7 Which athlete won the gold medal in the Men's Javelin Throw F46 category at the Para Athletics World Championships 2023?

- Ans
- 1. Ajeet Singh
 - 2. Nishad Kumar
 - 3. Sumit Antil
 - 4. Khilari Sachin

Question ID : 264330176140
Option 1 ID : 264330690856
Option 2 ID : 264330690858
Option 3 ID : 264330690855
Option 4 ID : 264330690857
Status : Answered
Chosen Option : 3

Q.8 India topped the medals tally in the International Shooting Sport Federation (ISSF) World Cup-2022, which was held in Cairo, Egypt from _____.

- Ans
- 1. 12 January 2022 to 22 January 2022
 - 2. 5 June 2022 to 15 June 2022
 - 3. 10 April 2022 to 19 April 2022
 - 4. 26 February 2022 to 8 March 2022

Question ID : 264330113756
Option 1 ID : 264330447109
Option 2 ID : 264330447111
Option 3 ID : 264330447112
Option 4 ID : 264330447110
Status : Not Answered
Chosen Option : --

Q.9 Which is the lengthiest written Constitution in the world?

- Ans
- 1. Indian Constitution
 - 2. US Constitution
 - 3. British Constitution
 - 4. French Constitution

Question ID : 264330116384
Option 1 ID : 264330457621
Option 2 ID : 264330457623
Option 3 ID : 264330457622
Option 4 ID : 264330457624
Status : Answered
Chosen Option : 1

Q.10 Who wrote the novel 'Vanity Fair'?

- Ans
- 1. Lewis Carroll
 - 2. William Thackeray
 - 3. Charles Dickens
 - 4. George Eliot

Question ID : 26433064233
Option 1 ID : 264330251526
Option 2 ID : 264330251525
Option 3 ID : 264330251524
Option 4 ID : 264330251527
Status : Not Answered
Chosen Option : --

Q.11 Who among the following social reformers founded the Ramakrishna Mission?

- Ans
- 1. Swami Shraddhanand
 - 2. Swami Dayanand
 - 3. Swami Vivekananda
 - 4. Swami Vrajananda

Question ID : 264330120308
Option 1 ID : 264330471485
Option 2 ID : 264330471483
Option 3 ID : 264330471484
Option 4 ID : 264330471486
Status : Answered
Chosen Option : 3

Q.12 According to the Economic Survey 2019-20, the top five trading partners of India continue to be USA, China, UAE and _____.

a) Saudi Arabia, b) Hong Kong, c) Singapore, d) Sri Lanka

- Ans
- 1. Both C and D
 - 2. Both A and B
 - 3. Both A and D
 - 4. Both B and C

Question ID : 264330109996
Option 1 ID : 264330432261
Option 2 ID : 264330432264
Option 3 ID : 264330432263
Option 4 ID : 264330432262
Status : Answered
Chosen Option : 4

Q.13 Who founded the Satya Shodhak Samaj ?

- Ans
- 1. Narayan Guru
 - 2. CN Annadurai
 - 3. Jyotirao Phule
 - 4. BR Ambedkar

Question ID : 264330120305
Option 1 ID : 264330471471
Option 2 ID : 264330471474
Option 3 ID : 264330471472
Option 4 ID : 264330471473
Status : Answered
Chosen Option : 3

Q.14 Which musical instrument does Gulfam Ahmed, who hails from Uttar Pradesh and has made contributions in the field of art, play apart from Sarod?

- Ans
- 1. Afghani Rabab
 - 2. Doyra
 - 3. Zirbaghali
 - 4. Afghani Ghichak

Question ID : 264330110241
Option 1 ID : 264330433241
Option 2 ID : 264330433243
Option 3 ID : 264330433242
Option 4 ID : 264330433244
Status : Not Answered
Chosen Option : --

Q.15 MK Saroja, a Padma Shri awardee, is known for which form of dance?

- Ans
- 1. Kathak
 - 2. Garba
 - 3. Bharatnatyam
 - 4. Kathakali

Question ID : 26433074884
Option 1 ID : 264330293627
Option 2 ID : 264330293625
Option 3 ID : 264330293626
Option 4 ID : 264330293624
Status : Answered
Chosen Option : 1

Q.16 Who among the following personalities is a Sangeet Natak Akademi award-winning folk dancer from Punjab?

- Ans
- 1. Ram Lal
 - 2. Mamta Chandrakar
 - 3. Nathoo Lal Solanki
 - 4. Balkar Singh Sidhu

Question ID : 264330182986
Option 1 ID : 264330717677
Option 2 ID : 264330717676
Option 3 ID : 264330717679
Option 4 ID : 264330717678
Status : Not Answered
Chosen Option : --

Q.17 The 'Kalol', 'Mehsana' and 'Nawagam' oil fields are associated with which state?

- Ans
- 1. Rajasthan
 - 2. Assam
 - 3. Gujarat
 - 4. Maharashtra

Question ID : 264330181230
Option 1 ID : 264330710843
Option 2 ID : 264330710844
Option 3 ID : 264330710846
Option 4 ID : 264330710845
Status : Answered
Chosen Option : 4

Q.18 Which of the following elements is present in common table salt?

- Ans
- 1. Magnesium
 - 2. Copper
 - 3. Sodium
 - 4. Calcium

Question ID : 264330117614
Option 1 ID : 264330462483
Option 2 ID : 264330462484
Option 3 ID : 264330462481
Option 4 ID : 264330462482
Status : Answered
Chosen Option : 3

Q.19 The Directive Principles of State Policy resembles the 'Instrument of Instructions' enumerated in the _____.

- Ans
- 1. Government of India Act of 1909
 - 2. Government of India Act of 1942
 - 3. Government of India Act of 1935
 - 4. Government of India Act of 1919

Question ID : 264330130451
Option 1 ID : 264330510915
Option 2 ID : 264330510918
Option 3 ID : 264330510917
Option 4 ID : 264330510916
Status : Answered
Chosen Option : 3

Q.20 In which year did the Central Government merge the CSO and NSSO and establish NSO under the Ministry of Statistics and Programme Implementation (MoSPI)?

- Ans 1. 2019
 2. 2017
 3. 2018
 4. 2016

Question ID : 264330130660
Option 1 ID : 264330511751
Option 2 ID : 264330511753
Option 3 ID : 264330511752
Option 4 ID : 264330511754
Status : Answered
Chosen Option : 2

Q.21 Which Indian classical dance is shown in the sculptures at the ancient Konark Sun Temple?

- Ans 1. Odissi
 2. Kuchipudi
 3. Mohiniyattam
 4. Manipuri

Question ID : 264330110401
Option 1 ID : 264330433883
Option 2 ID : 264330433882
Option 3 ID : 264330433884
Option 4 ID : 264330433881
Status : Answered
Chosen Option : 1

Q.22 From which of the following countries did India adopt the 'procedure established by the law'?

- Ans 1. The US
 2. Brazil
 3. Sri Lanka
 4. Japan

Question ID : 264330133046
Option 1 ID : 264330521237
Option 2 ID : 264330521236
Option 3 ID : 264330521238
Option 4 ID : 264330521235
Status : Answered
Chosen Option : 4

Q.23 Chaupakhya Festival is celebrated in the state of _____.

- Ans 1. Rajasthan
 2. Jharkhand
 3. Uttarakhand
 4. Chhattisgarh

Question ID : 264330113175
Option 1 ID : 264330444785
Option 2 ID : 264330444787
Option 3 ID : 264330444788
Option 4 ID : 264330444786
Status : Not Answered
Chosen Option : --

Q.24 The Chief Minister of Delhi is appointed by the _____.

- Ans
- 1. Governor
 - 2. Lieutenant Governor
 - 3. Prime Minister
 - 4. President of India

Question ID : 264330120191
Option 1 ID : 264330471019
Option 2 ID : 264330471022
Option 3 ID : 264330471021
Option 4 ID : 264330471020
Status : Answered
Chosen Option : 1

Q.25 The fifth Khelo India Youth Games was hosted by _____.

- Ans
- 1. Madhya Pradesh
 - 2. Maharashtra
 - 3. Haryana
 - 4. Punjab

Question ID : 264330130635
Option 1 ID : 264330511651
Option 2 ID : 264330511652
Option 3 ID : 264330511654
Option 4 ID : 264330511653
Status : Answered
Chosen Option : 1

Q.26 Which of the following is an example of eastern coast port?

- Ans
- 1. Kandla Port
 - 2. New Mangalore port
 - 3. Mumbai Port
 - 4. Chennai port

Question ID : 264330132714
Option 1 ID : 264330519953
Option 2 ID : 264330519951
Option 3 ID : 264330519954
Option 4 ID : 264330519952
Status : Answered
Chosen Option : 4

Q.27 According to their notion of kingship, many Kushana rulers adopted the title of _____.

- Ans
- 1. Dhartiputra
 - 2. Devaputra
 - 3. Aryaputra
 - 4. Suryaputra

Question ID : 264330119475
Option 1 ID : 264330468184
Option 2 ID : 264330468183
Option 3 ID : 264330468186
Option 4 ID : 264330468185
Status : Not Answered
Chosen Option : --

Q.28 In a food chain, the base of energy pyramid consists of:

- Ans
- 1. primary consumers
 - 2. secondary consumers
 - 3. producers
 - 4. tertiary consumers

Question ID : 264330120071
Option 1 ID : 264330470540
Option 2 ID : 264330470541
Option 3 ID : 264330470539
Option 4 ID : 264330470542
Status : Answered
Chosen Option : 3

Q.29 Who of the following Chola rulers initially occupied the northern part of Sri Lanka in his raids?

- Ans
- 1. Rajaraja I
 - 2. Parantaka I
 - 3. Rajadhiraja I
 - 4. Rajendra I

Question ID : 264330118000
Option 1 ID : 264330463815
Option 2 ID : 264330463816
Option 3 ID : 264330463818
Option 4 ID : 264330463817
Status : Answered
Chosen Option : 4

Q.30 Which of the following educational institute was established by Raja Ram Mohan Roy with the cooperation of David Hare in 1817 in Calcutta?

- Ans
- 1. Vedanta College
 - 2. Sanskrit College
 - 3. Hindu College
 - 4. Calcutta Madrasa

Question ID : 264330120270
Option 1 ID : 264330471336
Option 2 ID : 264330471338
Option 3 ID : 264330471335
Option 4 ID : 264330471337
Status : Answered
Chosen Option : 1

Q.31 Who among the following social reformers developed the modern Bengali Alphabet in British India?

- Ans
- 1. Keshab Chandra Sen
 - 2. Bankim Chandra Chatterjee
 - 3. Ishwar Chandra Vidyasagar
 - 4. Rabindra Nath Tagore

Question ID : 264330120431
Option 1 ID : 264330471976
Option 2 ID : 264330471975
Option 3 ID : 264330471978
Option 4 ID : 264330471977
Status : Answered
Chosen Option : 1

Q.32 According to the Census of India 2011, which Union Territory recorded the lowest literacy rate?

- Ans
- 1. Lakshadweep
 - 2. Puducherry
 - 3. Dadra and Nagar Haveli
 - 4. Daman and Diu

Question ID : 264330131755
Option 1 ID : 264330516122
Option 2 ID : 264330516120
Option 3 ID : 264330516121
Option 4 ID : 264330516119
Status : Answered
Chosen Option : 4

Q.33 Who is the author of the historical fiction 'Legend of Suheldev: The King Who Saved India'?

- Ans
- 1. Ramchandra Guha
 - 2. Ranjit Desai
 - 3. Nandini Sengupta
 - 4. Amish Tripathi

Question ID : 26433092402
Option 1 ID : 264330362897
Option 2 ID : 264330362899
Option 3 ID : 264330362900
Option 4 ID : 264330362898
Status : Not Answered
Chosen Option : --

Q.34 In the Eleventh Five-Year Plan, the Planning Commission targeted reducing the gender gap in literacy to _____ percentage points by 2011-2012.

- Ans
- 1. 10
 - 2. 20
 - 3. 30
 - 4. 40

Question ID : 264330179276
Option 1 ID : 264330703107
Option 2 ID : 264330703108
Option 3 ID : 264330703109
Option 4 ID : 264330703110
Status : Answered
Chosen Option : 2

Q.35 In which year was the National Rural Health Mission launched in India to provide accessible, affordable and quality health care to the rural population?

- Ans
- 1. 2005
 - 2. 2010
 - 3. 2007
 - 4. 2001

Question ID : 264330130577
Option 1 ID : 264330511420
Option 2 ID : 264330511422
Option 3 ID : 264330511421
Option 4 ID : 264330511419
Status : Not Answered
Chosen Option : --

Q.36 The Nizam Shahi dynasty of Ahmednagar was founded by _____ in 1490.

- Ans
- 1. Mohammed Shah I
 - 2. Alauddin Bahman Shah
 - 3. Tajuddin Firuz Shah
 - 4. Malik Ahmed Nizamul Mulk Bahri

Question ID : 264330114084
Option 1 ID : 264330448424
Option 2 ID : 264330448421
Option 3 ID : 264330448422
Option 4 ID : 264330448423
Status : Not Answered
Chosen Option : --

Q.37 Which Article of the Constitution of India is associated with the protection and improvement of the environment and safeguarding of forests and wild life?

- Ans
- 1. Article 39 A
 - 2. Article 48 A
 - 3. Article 43 A
 - 4. Article 51 A

Question ID : 264330181428
Option 1 ID : 264330711635
Option 2 ID : 264330711637
Option 3 ID : 264330711636
Option 4 ID : 264330711638
Status : Answered
Chosen Option : 2

Q.38 In the northern hemisphere, summer solstice occurs on:

- Ans
- 1. 21st June
 - 2. 21st May
 - 3. 21st April
 - 4. 21st March

Question ID : 264330117625
Option 1 ID : 264330462528
Option 2 ID : 264330462527
Option 3 ID : 264330462526
Option 4 ID : 264330462525
Status : Answered
Chosen Option : 4

Q.39 In which of the following places is the Losar Festival celebrated?

- Ans 1. Himachal Pradesh
 2. Nagaland
 3. Ladakh
 4. Lakshadweep

Question ID : 264330130870
Option 1 ID : 264330512593
Option 2 ID : 264330512592
Option 3 ID : 264330512591
Option 4 ID : 264330512594
Status : Answered
Chosen Option : 3

Q.40 Faiyyaz Khan, Latafat Hussein Khan and Dinkar Kaikini are famous exponents from which of the following Gharanas?

- Ans 1. Agra
 2. Jaipur
 3. Benaras
 4. Patiala

Question ID : 264330112678
Option 1 ID : 264330442799
Option 2 ID : 264330442798
Option 3 ID : 264330442797
Option 4 ID : 264330442800
Status : Not Answered
Chosen Option : --

Q.41 WTO was formed in the year 1995 to replace which of the following institutions?

- Ans 1. Industrial Board of Reconstruction and Development
 2. World Bank
 3. General Agreement of Trade and Tariff
 4. International Monetary Fund

Question ID : 264330111572
Option 1 ID : 264330438376
Option 2 ID : 264330438374
Option 3 ID : 264330438373
Option 4 ID : 264330438375
Status : Answered
Chosen Option : 3

Q.42 What process was discovered in the early 1990s that is currently used to remove ammonia from wastewater and contributes significantly to the loss of fixed nitrogen from the oceans?

- Ans 1. Pervasion
 2. Anammox
 3. Coalescence
 4. Volatilisation

Question ID : 264330141724
Option 1 ID : 264330555216
Option 2 ID : 264330555217
Option 3 ID : 264330555218
Option 4 ID : 264330555215
Status : Not Answered
Chosen Option : --

Q.43 Which of the following won the highest number of gold medals in the 36th national games?

- Ans 1. Punjab
 2. Services Sports Control Board
 3. Haryana
 4. Maharashtra

Question ID : 264330176925
Option 1 ID : 264330693898
Option 2 ID : 264330693895
Option 3 ID : 264330693897
Option 4 ID : 264330693896
Status : Answered
Chosen Option : 1

Q.44 Which of the following Harappan structures had a thin lining of bitumen to prevent the seepage of water ?

- Ans 1. Drainage
 2. Great Bath
 3. Roads
 4. Granaries

Question ID : 264330113553
Option 1 ID : 264330446297
Option 2 ID : 264330446298
Option 3 ID : 264330446299
Option 4 ID : 264330446300
Status : Answered
Chosen Option : 4

Q.45 Under competitive assets market condition, the price of a bond must always be _____ to its present value in equilibrium.

- Ans 1. twice
 2. half
 3. equal
 4. thrice

Question ID : 264330116506
Option 1 ID : 264330458109
Option 2 ID : 264330458111
Option 3 ID : 264330458110
Option 4 ID : 264330458112
Status : Answered
Chosen Option : 3

Q.46 Which letter code of Köppen climate characterises a hot-summer humid continental climate?

- Ans
- 1. Cfc
 - 2. BSh
 - 3. ETf
 - 4. Dfa

Question ID : 264330141725
Option 1 ID : 264330555221
Option 2 ID : 264330555222
Option 3 ID : 264330555219
Option 4 ID : 264330555220
Status : Not Answered
Chosen Option : --

Q.47 According to the seventh schedule of the Indian Constitution, Agriculture is in which list?

- Ans
- 1. Both Union and State List
 - 2. Concurrent list
 - 3. State list
 - 4. Union list

Question ID : 264330117572
Option 1 ID : 264330462316
Option 2 ID : 264330462315
Option 3 ID : 264330462314
Option 4 ID : 264330462313
Status : Answered
Chosen Option : 3

Q.48 Who among the following does NOT participate in the election of the President of India?

- Ans
- 1. Elected members of Lok Sabha
 - 2. Elected members of Rajya Sabha
 - 3. Elected members of legislative assembly
 - 4. Elected members of legislative council of state

Question ID : 264330177752
Option 1 ID : 264330697115
Option 2 ID : 264330697116
Option 3 ID : 264330697118
Option 4 ID : 264330697117
Status : Answered
Chosen Option : 4

Q.49 In which Budget was Disinvestment Fund and Asset Management Company set up?

- Ans
- 1. 2003-04
 - 2. 1991-92
 - 3. 1992-93
 - 4. 2000-01

Question ID : 264330109424
Option 1 ID : 264330429976
Option 2 ID : 264330429973
Option 3 ID : 264330429974
Option 4 ID : 264330429975
Status : Not Answered
Chosen Option : --

Q.50 The most common route for MNC investment is to buy up _____.

- Ans
- 1. local resources
 - 2. local technology
 - 3. local companies
 - 4. excess land and factories

Question ID : 264330110003
Option 1 ID : 264330432289
Option 2 ID : 264330432290
Option 3 ID : 264330432292
Option 4 ID : 264330432291
Status : Not Answered
Chosen Option : --

Section : Reasoning

Q.1 Select the set in which the numbers are related in the same way as are the numbers of the following sets.

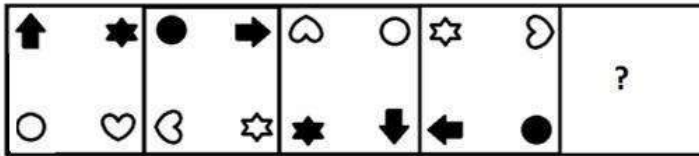
(NOTE: Operations should be performed on the whole numbers, without breaking down the numbers into its constituent digits. E.g. 13 – Operations on 13 such as adding/deleting/multiplying etc. to 13 can be performed. Breaking down 13 into 1 and 3 and then performing mathematical operations on 1 and 3 is not allowed)

(4, 9, 95)
(6, 10, 134)

- Ans
- 1. (7, 10, 174)
 - 2. (9, 12, 232)
 - 3. (8, 11, 183)
 - 4. (5, 8, 86)

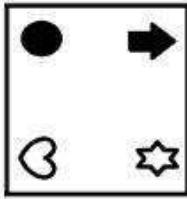
Question ID : 26433052098
Option 1 ID : 264330203695
Option 2 ID : 264330203697
Option 3 ID : 264330203696
Option 4 ID : 264330203694
Status : Answered
Chosen Option : 3

Q.2 Select the figure from among the given options that can replace the question mark (?) in the following series.




Ans

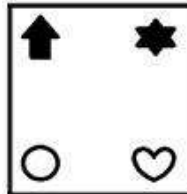
✗ 1.



✗ 2.



✓ 3.



✗ 4.



Question ID : 26433096025
 Option 1 ID : 264330376872
 Option 2 ID : 264330376871
 Option 3 ID : 264330376870
 Option 4 ID : 264330376869
 Status : Answered
 Chosen Option : 3

Q.3 In a certain code language, 'LAND' is written as 'BLYJ' and 'BIRD' is written as 'BPGZ'. How will 'WAIT' be written in that language?

Ans ✓ 1. RGYU

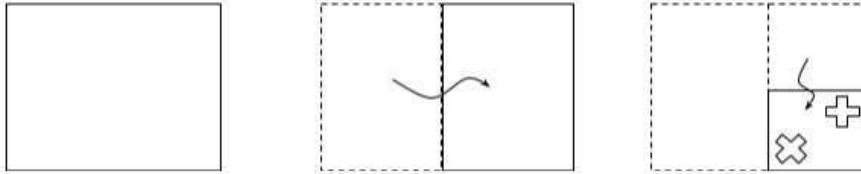
✗ 2. YURG

✗ 3. UYGR

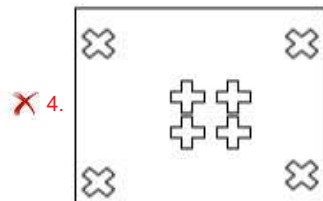
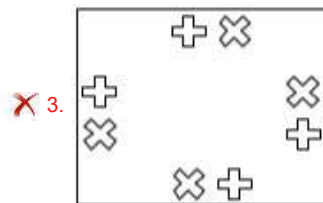
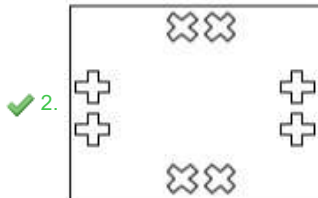
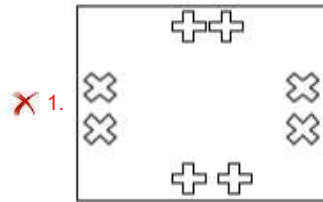
✗ 4. RGUY

Question ID : 26433087169
 Option 1 ID : 264330342313
 Option 2 ID : 264330342315
 Option 3 ID : 264330342314
 Option 4 ID : 264330342316
 Status : Answered
 Chosen Option : 1

Q.4 A paper is folded and cut as shown below. How will it appear when unfolded?



Ans



Question ID : 264330118712

Option 1 ID : 264330466100

Option 2 ID : 264330466099

Option 3 ID : 264330466101

Option 4 ID : 264330466102

Status : Answered

Chosen Option : 2

Q.5 Select the correct combination of mathematical signs to sequentially replace the * signs and to balance the given equation.

$$87 * 2 * 80 * 4 * 150 * 4$$

Ans ✗ 1. $x - + + =$

✗ 2. $x - = + +$

✗ 3. $+ x - = +$

✓ 4. $x - + = +$

Question ID : 26433085724

Option 1 ID : 264330336597

Option 2 ID : 264330336600

Option 3 ID : 264330336598

Option 4 ID : 264330336599

Status : Answered

Chosen Option : 4

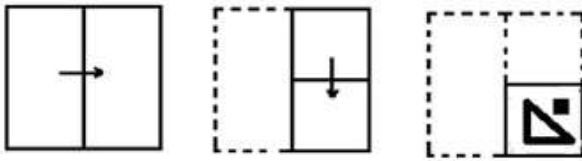
Q.6 Select the option that is related to the fifth letter cluster in the same way as the second letter cluster is related to the first letter cluster and the fourth letter cluster is related to the third letter cluster.

JFBW : FMXD :: KDZI : GKVP :: PRDY : ?

- Ans
- 1. GRUE
 - 2. LAPD
 - 3. NRHX
 - 4. LYZF

Question ID : 26433074694
 Option 1 ID : 264330292866
 Option 2 ID : 264330292865
 Option 3 ID : 264330292864
 Option 4 ID : 264330292867
 Status : Answered
 Chosen Option : 4

Q.7 A paper is folded and cut as shown below. How will it appear when unfolded?



Ans

- 1.
- 2.
- 3.
- 4.

Question ID : 264330117428
 Option 1 ID : 264330461753
 Option 2 ID : 264330461754
 Option 3 ID : 264330461756
 Option 4 ID : 264330461755
 Status : Answered
 Chosen Option : 3

Q.8 Two statements are given, followed by two conclusions numbered I and II. Assuming the statements to be true, even if they seem to be at variance with commonly known facts, decide which of the conclusions logically follow(s) from the statements.

Statements :

All trees are greens.

Some trees are conifers.

Conclusions:

I. All conifers are greens.

II. Some greens are trees.

Ans ✓ 1. Only Conclusion II follows.

✗ 2. Only Conclusion I follows.

✗ 3. Neither Conclusion I nor II follows.

✗ 4. Both Conclusions I and II follow.

Question ID : 26433081681

Option 1 ID : 264330320558

Option 2 ID : 264330320557

Option 3 ID : 264330320560

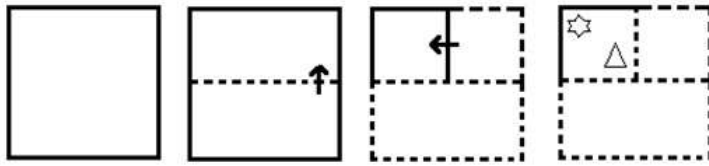
Option 4 ID : 264330320559

Status : Answered

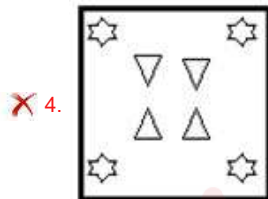
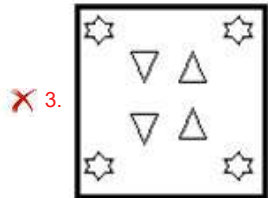
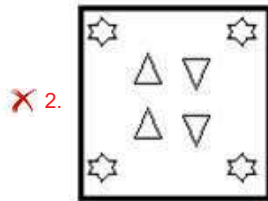
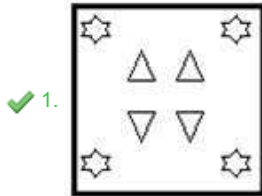
Chosen Option : 1



Q.9 The sequence of folding a piece of paper and the manner in which the folded paper is cut is shown in the following figures. How would this paper look when unfolded?



Ans

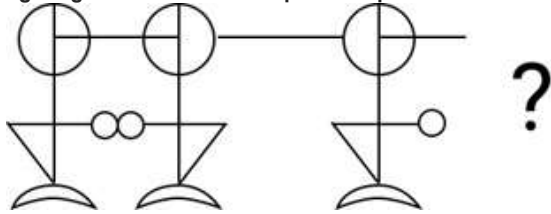


Question ID : 26433074796
 Option 1 ID : 264330293273
 Option 2 ID : 264330293274
 Option 3 ID : 264330293272
 Option 4 ID : 264330293275

Status : Answered

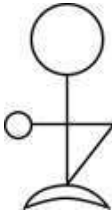
Chosen Option : 1

Q.10 Select the figure from the given options that will replace the question mark (?) in the figure given below and complete the pattern.

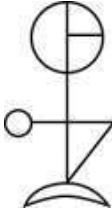


Ans

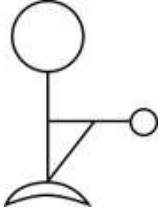
✗ 1.



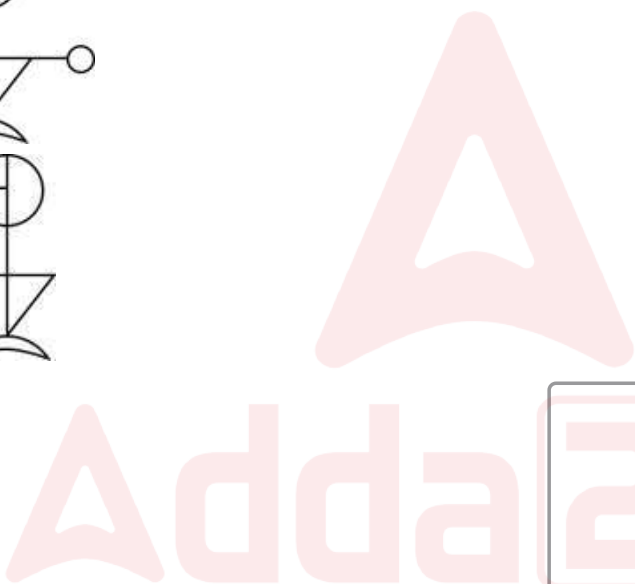
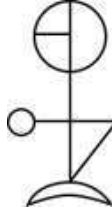
✗ 2.



✗ 3.



✓ 4.



Question ID : 264330111711

Option 1 ID : 264330438931

Option 2 ID : 264330438929

Option 3 ID : 264330438932

Option 4 ID : 264330438930

Status : Answered

Chosen Option : 4

Q.11 Which figure should replace the question mark (?) in the following series to continue the pattern?

2	△	0	9	9	T	2	A	
A	S	T	E	R	△	△	O	E
2	E	S	T	△	△	O	E	S
9	S	O	E	T	△	△	O	E
0	9	A	R	2	A	△	R	?

Ans

✗ 1.

△	2
S	O
E	T
9	
R	A

✓ 2.

A	E
T	2
S	O
R	
9	△

✗ 3.

E	R
A	9
2	S
T	
△	O

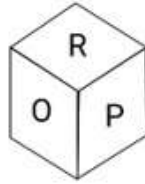
✗ 4.

A	R
T	9
S	O
E	
2	△

Question ID : 264330129611
 Option 1 ID : 264330507811
 Option 2 ID : 264330507812
 Option 3 ID : 264330507813
 Option 4 ID : 264330507810

Status : Answered
 Chosen Option : 2

Q.12 Six letters, M, N, O, P, Q and R are written on different faces of a dice. Three positions of this dice are shown here. Find the letter on the face opposite O.



- Ans
- 1. P
 - 2. R
 - 3. Q
 - 4. N

Question ID : 264330106404

Option 1 ID : 264330417918

Option 2 ID : 264330417920

Option 3 ID : 264330417919

Option 4 ID : 264330417917

Status : Answered

Chosen Option : 3



Q.13 Which of the following option figures will complete the pattern in the figure given below?



Ans

✓ 1.



✗ 2.



✗ 3.



✗ 4.

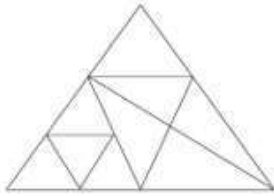


Question ID : 26433080601
Option 1 ID : 264330316340
Option 2 ID : 264330316339
Option 3 ID : 264330316338
Option 4 ID : 264330316337

Status : Answered

Chosen Option : 1

Q.14 How many triangles are there in the given figure?



- Ans
- 1. 15
 - 2. 12
 - 3. 14
 - 4. 17

Question ID : 26433080451
Option 1 ID : 264330315754
Option 2 ID : 264330315752
Option 3 ID : 264330315753
Option 4 ID : 264330315755

Status : Answered

Chosen Option : 1

Q.15 If + means \div , - means +, \times means - and \div means \times , what is the value of the following expressions?

$$20 \div 4 - 27 + 3 \times 12 = ?$$

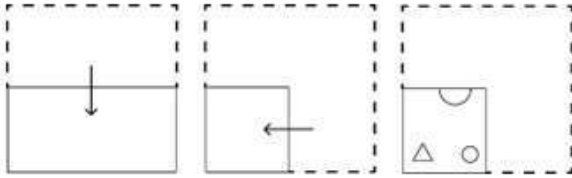
- Ans
- 1. 75
 - 2. 79
 - 3. 80
 - 4. 77

Question ID : 26433085649
Option 1 ID : 264330336298
Option 2 ID : 264330336299
Option 3 ID : 264330336297
Option 4 ID : 264330336300

Status : Answered

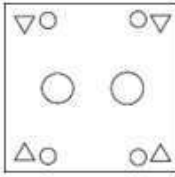
Chosen Option : 4

Q.16 A paper is folded and cut as shown below. How will it appear when unfolded?

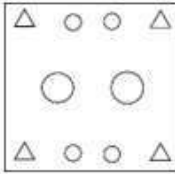


Ans

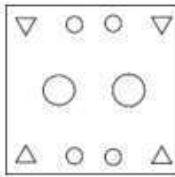
1.



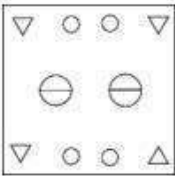
2.



3.



4.



Question ID : 264330114701

Option 1 ID : 264330450889

Option 2 ID : 264330450892

Option 3 ID : 264330450891


Option 4 ID : 264330450890

Status : Answered

Chosen Option : 3

Q.17 Select the correct mirror image of the given figure when the mirror is placed at PQ as shown below.

(-)/(=+*&#)(X)#



Ans

- 1. #(X)(#&#+*=)\(-)
- 2. #)X)(#&#*+=)\(-)
- 3. #(X()#&#*+=)\(-)
- 4. #(X)(#&#*+=)\(-)

Question ID : 26433082025
 Option 1 ID : 264330321936
 Option 2 ID : 264330321934
 Option 3 ID : 264330321933
 Option 4 ID : 264330321935
 Status : Answered
 Chosen Option : 4

Q.18 Six students are sitting around a circular table facing the centre. Dwiti is an immediate neighbour of both Durga and Dheeraj. Dilip is sitting second to the right of Dwiti. Dev is sitting third to the left of Dheeraj. Dilip is an immediate neighbour of both Daksh and Dheeraj. Who is an immediate neighbour of both Daksh and Durga?

- Ans
- 1. Dev
 - 2. Dilip
 - 3. Dwiti
 - 4. Dheeraj

Question ID : 264330110709
 Option 1 ID : 264330435115
 Option 2 ID : 264330435114
 Option 3 ID : 264330435113
 Option 4 ID : 264330435116
 Status : Answered
 Chosen Option : 1

Q.19 Select the option that represents the letters that, when sequentially placed from left to right in the blanks below, will complete the letter series.
 T__ES_YR_STY_E_TY__S

- Ans
- 1. YRTERSRE
 - 2. YRETRSRE
 - 3. YTRERSRE
 - 4. YETERESE

Question ID : 26433092537
 Option 1 ID : 264330363438
 Option 2 ID : 264330363440
 Option 3 ID : 264330363439
 Option 4 ID : 264330363437
 Status : Answered
 Chosen Option : 1

Q.20 Select the option that is related to the third term in the same way as the second term is related to the first term and the sixth term is related to the fifth term.
 225 : 15 :: 1225 : ? :: 2025 : 45

- Ans 1. 25
 2. 35
 3. 20
 4. 30

Question ID : 264330102260
 Option 1 ID : 264330401506
 Option 2 ID : 264330401508
 Option 3 ID : 264330401505
 Option 4 ID : 264330401507
 Status : Answered
 Chosen Option : 2

Q.21 Which figure should replace the question mark (?) if the series were to be continued?

S	T	T	O	A	U	U	Z	
D	O	U	R	S	D	T	Z	O
R	A	A	U	R	D	D	O	?

Ans

1.

D	O
T	B
U	Z
2.

D	U
T	R
O	Z
3.

D	O
U	B
R	T
4.

D	T
U	B
R	Z

Question ID : 264330130815
 Option 1 ID : 264330512374
 Option 2 ID : 264330512371
 Option 3 ID : 264330512373
 Option 4 ID : 264330512372
 Status : Answered
 Chosen Option : 3

Q.22 Select the number from among the given options that can replace the question mark (?) in the following series.
1, ?, 42, 78, 127, 191

Ans 1. 17

2. 21

3. 16

4. 15

Question ID : 264330111624

Option 1 ID : 264330438583

Option 2 ID : 264330438584

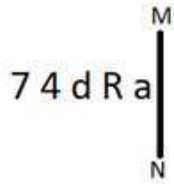
Option 3 ID : 264330438581

Option 4 ID : 264330438582

Status : Answered

Chosen Option : 1

Q.23 Select the correct mirror image of the given figure when the mirror is placed at MN as shown below.



Ans 1. R a b 4 7

2. 7 4 e R

3. 7 4 b R a

4. 7 4 R a

Question ID : 264330166659

Option 1 ID : 264330653677

Option 2 ID : 264330653678

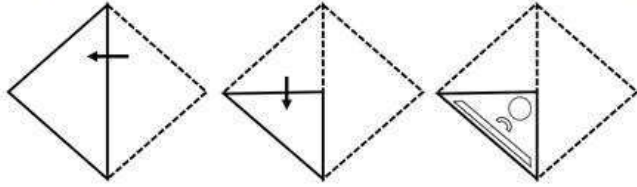
Option 3 ID : 264330653675

Option 4 ID : 264330653676

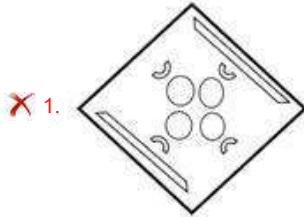
Status : Answered

Chosen Option : 3

Q.24 A paper is folded and cut as shown below. How will it appear when unfolded?



Ans



Question ID : 26433076501

Option 1 ID : 264330300069

Option 2 ID : 264330300071

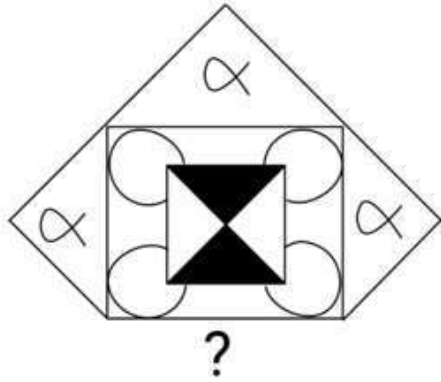
Option 3 ID : 264330300068

Option 4 ID : 264330300070

Status : Answered

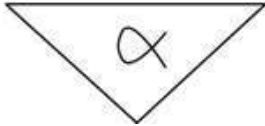
Chosen Option : 2

Q.25 Select the figure from the given options that will replace the question mark (?) in the figure given below to complete the pattern.

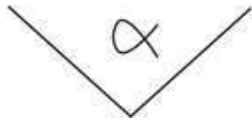


Ans


1.



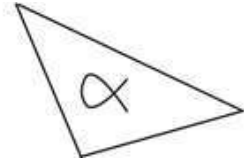
2.



3.



4.



Question ID : 264330116611

Option 1 ID : 264330458531

Option 2 ID : 264330458529

Option 3 ID : 264330458530

Option 4 ID : 264330458532

Status : Answered

Chosen Option : 1

Section : Numerical Ability

Q.1 What is the LCM of 9, 8.1, 0.27, 0.09?

Ans 1. 8100

2. 81

3. 810

4. 801

Question ID : 264330104335

Option 1 ID : 264330409644

Option 2 ID : 264330409641

Option 3 ID : 264330409643

Option 4 ID : 264330409642

Status : Answered

Chosen Option : 2

Q.2 If the diameter of a hemisphere is 8 cm, then the volume of the hemisphere (in cm^3) is:

Ans

1. $41\frac{2}{3}\pi$

2. $42\frac{2}{3}\pi$

3. $48\frac{1}{3}\pi$

4. $46\frac{1}{3}\pi$

Question ID : 264330119367

Option 1 ID : 264330467755

Option 2 ID : 264330467756

Option 3 ID : 264330467757

Option 4 ID : 264330467758

Status : Answered

Chosen Option : 2

Q.3 How many digits will be there after the decimal point in the product of 0.325 and 1.0302?

Ans

1. 8

2. 5

3. 7

4. 6

Question ID : 264330109327

Option 1 ID : 264330429588

Option 2 ID : 264330429585

Option 3 ID : 264330429587

Option 4 ID : 264330429586

Status : Answered

Chosen Option : 3

Q.4 The HCF of $\frac{1}{3}, \frac{2}{3}, \frac{2}{9}$ and $\frac{3}{12}$ is:

Ans

1. $\frac{1}{36}$

2. $\frac{1}{60}$

3. $\frac{1}{48}$

4. $\frac{1}{12}$

Question ID : 264330106058

Option 1 ID : 264330416536

Option 2 ID : 264330416535

Option 3 ID : 264330416534

Option 4 ID : 264330416533

Status : Answered

Chosen Option : 1

Q.5 Ram sold a chair at a profit of $7\frac{1}{2}\%$. If he had sold it for ₹1,430 more, he would have gained 35%. What is the cost price of the chair?

- Ans 1. ₹5,200
 2. ₹4,000
 3. ₹5,000
 4. ₹4,800

Question ID : 264330118126
Option 1 ID : 264330464322
Option 2 ID : 264330464319
Option 3 ID : 264330464321
Option 4 ID : 264330464320
Status : Answered
Chosen Option : 1

Q.6 A sum of money was borrowed and paid back in two annual installments of ₹960 each, allowing 5% compound interest. The sum borrowed was:

- Ans 1. ₹1,785.03
 2. ₹1,850.05
 3. ₹1,695.05
 4. ₹1,875.03

Question ID : 264330104526
Option 1 ID : 264330410407
Option 2 ID : 264330410405
Option 3 ID : 264330410408
Option 4 ID : 264330410406
Status : Not Answered
Chosen Option : --

Q.7 After allowing a discount of 20% on the marked price of an article, it is sold for ₹500. Find its marked price.

- Ans 1. ₹550
 2. ₹520
 3. ₹625
 4. ₹525

Question ID : 264330183851
Option 1 ID : 264330721080
Option 2 ID : 264330721081
Option 3 ID : 264330721082
Option 4 ID : 264330721083
Status : Answered
Chosen Option : 3

Q.8 The ratio of incomes of A, B and C is 3 : 5 : 4. If the income of A is tripled, the income of C is doubled and the income of B remains the same, what is the ratio of their new incomes?

- Ans
- 1. 8 : 5 : 9
 - 2. 9 : 5 : 8
 - 3. 9 : 8 : 5
 - 4. 5 : 8 : 9

Question ID : 264330112095
Option 1 ID : 264330440468
Option 2 ID : 264330440465
Option 3 ID : 264330440466
Option 4 ID : 264330440467
Status : Answered
Chosen Option : 2

Q.9 Farida shifted to a job in the social sector at a monthly salary that was 28% less than the monthly salary she was getting in her previous job. If Farida's monthly salary in the job in the social sector is ₹27,000, what was her monthly salary (in ₹) in the previous job?

- Ans
- 1. 36000
 - 2. 37500
 - 3. 38250
 - 4. 38500

Question ID : 264330103243
Option 1 ID : 264330405279
Option 2 ID : 264330405280
Option 3 ID : 264330405277
Option 4 ID : 264330405278
Status : Answered
Chosen Option : 2

Q.10 The difference between the simple interests on ₹1,800 for 3 years at different rates is ₹40. The difference between the rates of interest is:

- Ans
- 1. $\frac{20}{27}\%$
 - 2. $\frac{13}{27}\%$
 - 3. $\frac{23}{27}\%$
 - 4. $\frac{11}{27}\%$

Question ID : 264330119342
Option 1 ID : 264330467657
Option 2 ID : 264330467656
Option 3 ID : 264330467655
Option 4 ID : 264330467658
Status : Answered
Chosen Option : 1

Q.11 A works twice as fast as B. If both of them together can finish a piece of work in 12 days, then B alone can do it in:

- Ans
- 1. 34 days
 - 2. 38 days
 - 3. 36 days
 - 4. 32 days

Question ID : 264330104210
Option 1 ID : 264330409142
Option 2 ID : 264330409144
Option 3 ID : 264330409143
Option 4 ID : 264330409141
Status : Answered
Chosen Option : 3

Q.12 If the average of 5 consecutive numbers is 24, then the smallest number is:

- Ans
- 1. 21
 - 2. 22
 - 3. 23
 - 4. 20

Question ID : 264330129387
Option 1 ID : 264330506915
Option 2 ID : 264330506916
Option 3 ID : 264330506917
Option 4 ID : 264330506914
Status : Answered
Chosen Option : 2

Q.13 There are only two hostels in XYZ University, Hostel P and Hostel Q, wherein an equal number of students were living in year 2021. The total number of persons living in both hostels of XYZ University fell by 33% to 8,375 in 2022 from 2021. How many students were living in Hostel P in 2021?

- Ans
- 1. 12,500
 - 2. 5,750
 - 3. 6,250
 - 4. 5,612

Question ID : 264330112209
Option 1 ID : 264330440923
Option 2 ID : 264330440921
Option 3 ID : 264330440924
Option 4 ID : 264330440922
Status : Answered
Chosen Option : 3

Q.14 A student goes to school at a speed of 20 km/h and reaches 6 min late. If he goes at a speed of 30 km/h, he is 6 min early. What is the distance to the school?

- Ans
- 1. 17 km
 - 2. 16 km
 - 3. 12 km
 - 4. 18 km

Question ID : 264330104530
Option 1 ID : 264330410424
Option 2 ID : 264330410422
Option 3 ID : 264330410423
Option 4 ID : 264330410421
Status : Answered
Chosen Option : 3

Q.15 The side of a triangle is 17 cm and height of the triangle from this side is 10 cm. Find the area of the triangle.

- Ans
- 1. 95 cm^2
 - 2. 90 cm^2
 - 3. 85 cm^2
 - 4. 75 cm^2

Question ID : 264330130969
Option 1 ID : 264330512990
Option 2 ID : 264330512988
Option 3 ID : 264330512987
Option 4 ID : 264330512989
Status : Answered
Chosen Option : 3

Section : Computer Proficiency

Q.1 When you 'reply' to an email, what does it mean?

- Ans
- 1. You're sending the same email back to the original sender.
 - 2. You're sending the email to a different recipient.
 - 3. You're sending a new email to the same recipient.
 - 4. You're deleting the email.

Question ID : 264330182465
Option 1 ID : 264330715652
Option 2 ID : 264330715653
Option 3 ID : 264330715651
Option 4 ID : 264330715654
Status : Answered
Chosen Option : 3

Q.2 Which protocol allows users to make real-time voice and video calls over the internet?

- Ans
- 1. FTP
 - 2. VoIP
 - 3. Email
 - 4. DNS

Question ID : 264330174469
Option 1 ID : 264330684296
Option 2 ID : 264330684297
Option 3 ID : 264330684295
Option 4 ID : 264330684298
Status : Answered
Chosen Option : 1

Q.3 In MS Excel 365, which of the following is the correct shortcut key to open an existing spreadsheet in MS Excel?

- Ans
- 1. Press Alternate (Alt) + N
 - 2. Press Control (Ctrl) + O
 - 3. Press Control (Ctrl) + N
 - 4. Press Alternate (Alt) + O

Question ID : 264330176682
Option 1 ID : 264330692944
Option 2 ID : 264330692946
Option 3 ID : 264330692943
Option 4 ID : 264330692945
Status : Answered
Chosen Option : 2

Q.4 In MS Word 365 which of the following menus is used to open a word document?

- Ans
- 1. Start
 - 2. Mozilla
 - 3. Power
 - 4. Control panel

Question ID : 264330180448
Option 1 ID : 264330707759
Option 2 ID : 264330707761
Option 3 ID : 264330707760
Option 4 ID : 264330707762
Status : Answered
Chosen Option : 1

Q.5 In Microsoft Word 365, the AutoCorrect feature is used for _____.

- Ans
- 1. misspelled text
 - 2. outside margin text
 - 3. formulas
 - 4. short repetitive text

Question ID : 264330182071
Option 1 ID : 264330714126
Option 2 ID : 264330714124
Option 3 ID : 264330714125
Option 4 ID : 264330714123
Status : Answered
Chosen Option : 1

Q.6 In MS Excel 365, which of the following groups contains the Insert and Delete command in the Home tab of the ribbon in MS-Excel 365?

- Ans
- 1. Editing
 - 2. Cells
 - 3. Alignment
 - 4. Font

Question ID : 264330175965
Option 1 ID : 264330690157
Option 2 ID : 264330690158
Option 3 ID : 264330690156
Option 4 ID : 264330690155
Status : Answered
Chosen Option : 1

Q.7 एमएस वर्ड 365 (MS Word 365) में, कौन-सा टेक्स्ट अलाइनमेंट विकल्प आमतौर पर कानूनी दस्तावेजों के लिए उपयोग किया जाता है, क्योंकि यह टेक्स्ट को बाएं और दाएं दोनों हाशिये पर अलाइन करता है, जिससे दाईं ओर एक दंतुरित किनारा (jagged edge) रह जाता है?

- Ans
- 1. लेफ्ट अलाइन (Left Align)
 - 2. सेंटर अलाइन (Center Align)
 - 3. राइट अलाइन (Right Align)
 - 4. जस्टीफाई (Justify)

Question ID : 264330178091
Option 1 ID : 264330698427
Option 2 ID : 264330698429
Option 3 ID : 264330698428
Option 4 ID : 264330698430
Status : Answered
Chosen Option : 2

Q.8 In MS Excel 365, Which of the following keyboard shortcuts is used to auto fit row height manually in MS Excel?

- Ans
- 1. Alt + H + O + A
 - 2. Alt + O + C + W
 - 3. Alt + H + O + H
 - 4. Alt + O + C + N

Question ID : 264330181071
Option 1 ID : 264330710228
Option 2 ID : 264330710229
Option 3 ID : 264330710227
Option 4 ID : 264330710230
Status : Answered
Chosen Option : 1

Q.9 Which of the following tabs is used in MS Word 365 if we want to delete a table?

- Ans
- 1. Insert tab
 - 2. Edit tab
 - 3. File tab
 - 4. Layout tab

Question ID : 264330180423

Option 1 ID : 264330707659

Option 2 ID : 264330707660

Option 3 ID : 264330707661

Option 4 ID : 264330707662

Status : Answered

Chosen Option : 2

Q.10 Which of the following shortcut keys is used to make Centre-aligned text in MS-Word 365?

- Ans
- 1. Ctrl + E
 - 2. Ctrl + R
 - 3. Ctrl + J
 - 4. Ctrl + C

Question ID : 264330173593

Option 1 ID : 264330680851

Option 2 ID : 264330680853

Option 3 ID : 264330680854

Option 4 ID : 264330680852

Status : Answered

Chosen Option : 4

Adda247

Constable Executive Male and Female in Delhi Police Examination 2023

Roll Number	
Candidate Name	
Venue Name	ION Digital Zone iDZ Sivathapuram
Exam Date	01/12/2023
Exam Time	9:00 AM - 10:30 AM
Subject	Constable Executive Male and Female in Delhi Police Examination 2023

Section : General Knowledge

Q.1 Which of the following Articles of the Constitution of India talks about equality before law or equal protection of the laws?

- Ans
- 1. Article 23
 - 2. Article 14
 - 3. Article 21
 - 4. Article 17

Question ID : 264330180867
Option 1 ID : 264330709434
Option 2 ID : 264330709431
Option 3 ID : 264330709433
Option 4 ID : 264330709432
Status : Answered
Chosen Option : 2

Q.2 In India, who is regarded as the father of modern dance?

- Ans
- 1. Vempati Chinna Satyam
 - 2. Uday Shankar
 - 3. Bipin Singh
 - 4. Kelucharan Mahapatra

Question ID : 264330112522
Option 1 ID : 264330442176
Option 2 ID : 264330442173
Option 3 ID : 264330442174
Option 4 ID : 264330442175
Status : Not Answered
Chosen Option : --

Q.3 Which is the oldest living tree species with fan-shaped leaves commonly used in the treatment of blood disorders and memory issues?

- Ans
- 1. Alder
 - 2. Ginkgo
 - 3. Cedar
 - 4. Willow

Question ID : 264330141702
Option 1 ID : 264330555130
Option 2 ID : 264330555128
Option 3 ID : 264330555127
Option 4 ID : 264330555129
Status : Not Answered
Chosen Option : --

Q.4 Which type of jurisdiction of the Supreme Court can be invoked for the given category of case if the High Court on appeal reverses an order of acquittal of an accused person and sentences him to death?

- Ans**
- 1. Appellate jurisdiction in regard to civil matters (Art. 133)
 - 2. Review of judgments or orders by the Supreme Court (Art. 137)
 - 3. Appellate jurisdiction in regard to criminal matters (Art. 134)
 - 4. Appellate jurisdiction in appeals from High Courts in certain cases (Art. 132)

Question ID : 26433069886
Option 1 ID : 264330274050
Option 2 ID : 264330274051
Option 3 ID : 264330274049
Option 4 ID : 264330274048
Status : Answered
Chosen Option : 4

Q.5 Which of the following committees was constituted in 2012 to review the Poverty Measurement Methodology and submitted its report in June 2014?

- Ans**
- 1. Rangarajan Committee
 - 2. Lakdawala Committee
 - 3. Kirit Parikh Committee
 - 4. Dandekar Committee

Question ID : 264330183045
Option 1 ID : 264330717914
Option 2 ID : 264330717913
Option 3 ID : 264330717915
Option 4 ID : 264330717912
Status : Answered
Chosen Option : 1

Q.6 The Planning Commission looks after crucial aspects such as formulation, implementation and regulation of the Five-Year Plans. In which year was the Planning Commission replaced by a think tank called NITI Aayog?

- Ans**
- 1. 2020
 - 2. 2015
 - 3. 2012
 - 4. 2017

Question ID : 264330130663
Option 1 ID : 264330511763
Option 2 ID : 264330511765
Option 3 ID : 264330511766
Option 4 ID : 264330511764
Status : Answered
Chosen Option : 2

Q.7 New economic policy is also known as _____.

- Ans
- 1. globalisation
 - 2. new economic law
 - 3. new economic region
 - 4. new economic reforms

Question ID : 264330110024
Option 1 ID : 264330432376
Option 2 ID : 264330432375
Option 3 ID : 264330432374
Option 4 ID : 264330432373
Status : Answered
Chosen Option : 1

Q.8 The National Waterways-4 (NW-4) is associated with which rivers from among the following?

- Ans
- 1. Narmada and Tapi
 - 2. Godavari and Krishna
 - 3. Ganga and Yamuna
 - 4. Chambal and Mahanadi

Question ID : 264330178719
Option 1 ID : 264330700904
Option 2 ID : 264330700905
Option 3 ID : 264330700903
Option 4 ID : 264330700906
Status : Not Answered
Chosen Option : --

Q.9 Pandit Ravi Shankar is known to be a legend in Hindustani classical music. He is associated with which of the following instruments?

- Ans
- 1. Sitar
 - 2. Violin
 - 3. Rudra veena
 - 4. Guitar

Question ID : 264330111957
Option 1 ID : 264330439915
Option 2 ID : 264330439913
Option 3 ID : 264330439916
Option 4 ID : 264330439914
Status : Not Answered
Chosen Option : --

Q.10 Which of the following Writs protects the right to life and personal liberty?

- Ans
- 1. Quo Warranto
 - 2. Prohibition
 - 3. Habeas Corpus
 - 4. Mandamus

Question ID : 264330134571
Option 1 ID : 264330527242
Option 2 ID : 264330527241
Option 3 ID : 264330527240
Option 4 ID : 264330527239
Status : Answered
Chosen Option : 3

Q.11 Who was the Sultan of the Delhi Sultanate when the Bahmani Kingdom was established in South India?

- Ans
- 1. Shamsud-Din Illutmish
 - 2. Muhammad-bin-Tughlaq
 - 3. Ibrahim Lodi
 - 4. Alauddin Khalji

Question ID : 264330182267
Option 1 ID : 264330714894
Option 2 ID : 264330714892
Option 3 ID : 264330714891
Option 4 ID : 264330714893
Status : Not Answered
Chosen Option : --

Q.12 From which of the following states does singer Shyamamani Devi hail?

- Ans
- 1. Tripura
 - 2. Uttar Pradesh
 - 3. Odisha
 - 4. Madhya Pradesh

Question ID : 264330112688
Option 1 ID : 264330442840
Option 2 ID : 264330442839
Option 3 ID : 264330442837
Option 4 ID : 264330442838
Status : Not Answered
Chosen Option : --

Q.13 Which of the following statements is/are correct regarding the Directive Principles of State Policy of the Indian Constitution?

- A. The 42nd Constitutional Amendment Act of 1976 added six Directive Principles of State Policy to the Constitution.
- B. The 86th Constitutional Amendment Act of 2002 substituted a new article for Article 45 and made elementary education as a Fundamental Right.

- Ans
- 1. B only
 - 2. A only
 - 3. Neither A nor B
 - 4. Both A and B

Question ID : 264330114764
Option 1 ID : 264330451142
Option 2 ID : 264330451141
Option 3 ID : 264330451144
Option 4 ID : 264330451143
Status : Answered
Chosen Option : 4

Q.14 'The Race of My Life' is written by which of the following personalities?

- Ans
- 1. Dutee Chand
 - 2. PT Usha
 - 3. Praveen Kumar
 - 4. Milkha Singh

Question ID : 26433055349
Option 1 ID : 264330216382
Option 2 ID : 264330216381
Option 3 ID : 264330216383
Option 4 ID : 264330216380
Status : Answered
Chosen Option : 2

Q.15 Where was Mahatma Gandhi's first major public appearance in India after his return from South Africa?

- Ans
- 1. At the Indigo Satyagraha at Champaran, in 1917
 - 2. At the opening ceremony of the Banaras Hindu University, Banaras, in 1916
 - 3. At the mill workers' protest at Kheda, in 1917
 - 4. At the protest against the King's visit at Bombay, in 1916

Question ID : 264330118999
Option 1 ID : 264330466651
Option 2 ID : 264330466654
Option 3 ID : 264330466652
Option 4 ID : 264330466653
Status : Answered
Chosen Option : 3

Q.16 Which of the following schemes is for collateral free loans to small/micro business enterprises and individuals in the non-agricultural sector?

- Ans
- 1. PMRPY
 - 2. PMEGP
 - 3. PMMY
 - 4. PMJDY

Question ID : 264330110189
Option 1 ID : 264330433036
Option 2 ID : 264330433035
Option 3 ID : 264330433034
Option 4 ID : 264330433033
Status : Answered
Chosen Option : 3

Q.17 Magma is defined as:

- Ans
- 1. the extremely hot liquid and semi-liquid rock located under the Earth's surface
 - 2. the extremely hot solid core of the Earth
 - 3. the volatile gaseous environment under the Earth's surface
 - 4. the extremely hot water springs of the Atlantic region

Question ID : 264330131818
Option 1 ID : 264330516371
Option 2 ID : 264330516372
Option 3 ID : 264330516373
Option 4 ID : 264330516374
Status : Answered
Chosen Option : 2

Q.18 Which of the following statements are correct regarding the Pushkar Fair of Rajasthan?

- A. The main aim of the Pushkar Fair is to promote show cattle such as camels, horses, cows, goats, sheep etc.
- B. This festival is celebrated in the month of November at the time of Kartik Purnima.
- C. Although this festival is an animal festival, the trade of animals is prohibited in the fair.

- Ans
- 1. A,B and C
 - 2. A and C only
 - 3. A and B only
 - 4. B and C only

Question ID : 264330119836

Option 1 ID : 264330469619

Option 2 ID : 264330469622

Option 3 ID : 264330469620

Option 4 ID : 264330469621

Status : **Not Answered**

Chosen Option : --

Q.19 Which of the following are also known as a stratovolcanoes, a large volcano generally composed of lava flows, pyroclastic deposits, and mudflow deposits, as well as lava domes?

- Ans
- 1. Shield volcanoes
 - 2. Mid-ocean ridge volcanoes
 - 3. Composite volcanoes
 - 4. Cinder cone volcanoes

Question ID : 264330113519

Option 1 ID : 264330446162

Option 2 ID : 264330446163

Option 3 ID : 264330446161

Option 4 ID : 264330446164

Status : **Answered**

Chosen Option : 2

Q.20 Which is India's biggest football stadium?

- Ans
- 1. Jawaharlal Nehru Stadium
 - 2. Chandrasekharan Nair Stadium
 - 3. Indira Gandhi Stadium
 - 4. Salt Lake City Stadium

Question ID : 264330119278

Option 1 ID : 264330467399

Option 2 ID : 264330467401

Option 3 ID : 264330467400

Option 4 ID : 264330467402

Status : **Not Attempted and Marked For Review**

Chosen Option : --

Q.21 Which of the following rivers is NOT the part of Sapta-Sindhu, the region where early Vedic Aryans lived?

- Ans
- 1. Asikni
 - 2. Bhagirathi
 - 3. Parushni
 - 4. Vitasta

Question ID : 264330130538
Option 1 ID : 264330511264
Option 2 ID : 264330511266
Option 3 ID : 264330511263
Option 4 ID : 264330511265
Status : Not Answered
Chosen Option : --

Q.22 Siri Fort at New Delhi of medieval times is an epitome of which of the following architectures?

- Ans
- 1. Mauryan architecture
 - 2. Dravidian architecture
 - 3. Islamic Architecture
 - 4. Kalinga architecture

Question ID : 264330106236
Option 1 ID : 264330417248
Option 2 ID : 264330417245
Option 3 ID : 264330417247
Option 4 ID : 264330417246
Status : Not Answered
Chosen Option : --

Q.23 Akbar's half-brother Mirza Hakim was the ruler of _____ and revolted against Akbar.

- Ans
- 1. Lahore
 - 2. Kabul
 - 3. Fergana
 - 4. Iran

Question ID : 264330106569
Option 1 ID : 264330418578
Option 2 ID : 264330418579
Option 3 ID : 264330418580
Option 4 ID : 264330418577
Status : Not Answered
Chosen Option : --

Q.24 Who led the famous Satyagraha of Bardoli?

- Ans
- 1. Vithalbhai Patel
 - 2. Sardar Vallabhbhai Patel
 - 3. Rajendra Prasad
 - 4. Mahatma Gandhi

Question ID : 264330114045
Option 1 ID : 264330448267
Option 2 ID : 264330448268
Option 3 ID : 264330448266
Option 4 ID : 264330448265
Status : Not Answered
Chosen Option : --

Q.25 The part of the Peninsular plateau lying north of the Narmada river is known as:

- Ans 1. Central Highlands
 2. Western Ghats
 3. Eastern Ghats
 4. Deccan Plateau

Question ID : 264330176006
Option 1 ID : 264330690320
Option 2 ID : 264330690322
Option 3 ID : 264330690321
Option 4 ID : 264330690319
Status : Answered
Chosen Option : 1

Q.26 Which of the following statements is INCORRECT?

- Ans 1. NNP at factor cost is referred to as the national income.
 2. Personal Income and Personal Disposable Incomes are concepts related to households' income.
 3. GNP includes output produced by a nation's owned factors of production
 4. From the point of view of employment generation at home, GNP is more relevant than GDP.

Question ID : 264330117581
Option 1 ID : 264330462350
Option 2 ID : 264330462352
Option 3 ID : 264330462349
Option 4 ID : 264330462351
Status : Not Attempted and Marked For Review
Chosen Option : --

Q.27 According to the Census of India 2011, which state of India has the highest Buddhist population?

- Ans 1. Sikkim
 2. Assam
 3. Madhya Pradesh
 4. Maharashtra

Question ID : 264330132730
Option 1 ID : 264330520016
Option 2 ID : 264330520015
Option 3 ID : 264330520018
Option 4 ID : 264330520017
Status : Answered
Chosen Option : 1

Q.28 When does the Raksha Bandhan fall according to the Hindu calendar?

- Ans
- 1. Kartika Poonima (Shukla)
 - 2. Shravana Poonima (Shukla)
 - 3. Phalgun Poonima (Shukla)
 - 4. Bhadrapada Poonima (Shukla)

Question ID : 264330110461
Option 1 ID : 264330434121
Option 2 ID : 264330434122
Option 3 ID : 264330434124
Option 4 ID : 264330434123
Status : Not Answered
Chosen Option : --

Q.29 It has been proved that, during a chemical reaction, atoms are neither created nor destroyed. This law is also known as the:

- Ans
- 1. law of conservation of energy
 - 2. law of conservation of mass
 - 3. law of conservation of momentum
 - 4. law of conservation of charge

Question ID : 264330177019
Option 1 ID : 264330694271
Option 2 ID : 264330694273
Option 3 ID : 264330694272
Option 4 ID : 264330694274
Status : Answered
Chosen Option : 1

Q.30 What does 'Toran' in the Stupa Architecture refers to?

- Ans
- 1. Dome
 - 2. Pillars
 - 3. Entry gates
 - 4. Umbrella

Question ID : 26433086593
Option 1 ID : 264330340014
Option 2 ID : 264330340015
Option 3 ID : 264330340016
Option 4 ID : 264330340013
Status : Not Answered
Chosen Option : --

Q.31 Where is the headquarters of the Squash Rackets Federation of India located?

- Ans
- 1. Chennai
 - 2. Bangalore
 - 3. Mumbai
 - 4. New Delhi

Question ID : 264330118469
Option 1 ID : 264330465278
Option 2 ID : 264330465280
Option 3 ID : 264330465277
Option 4 ID : 264330465279
Status : Not Answered
Chosen Option : --

Q.32 Impeachment charges against the President can be initiated by either House of the Parliament, but the charges must be signed by _____ members of the impeachment house.

- Ans
- 1. one-sixth
 - 2. one-fourth
 - 3. one-third
 - 4. one-tenth

Question ID : 264330130467
Option 1 ID : 264330510982
Option 2 ID : 264330510980
Option 3 ID : 264330510979
Option 4 ID : 264330510981
Status : Answered
Chosen Option : 3

Q.33 Which Article of the Constitution of India says that the State shall endeavour to secure for the citizens a uniform civil code throughout the territory of India?

- Ans
- 1. Article 51
 - 2. Article 40
 - 3. Article 42
 - 4. Article 44

Question ID : 264330110804
Option 1 ID : 264330435496
Option 2 ID : 264330435493
Option 3 ID : 264330435494
Option 4 ID : 264330435495
Status : Answered
Chosen Option : 4

Q.34 Which of the following are used as soil binders?

- Ans
- 1. Fungi
 - 2. Algae
 - 3. Pteridophytes
 - 4. Bryophytes

Question ID : 264330117594
Option 1 ID : 264330462404
Option 2 ID : 264330462403
Option 3 ID : 264330462402
Option 4 ID : 264330462401
Status : Answered
Chosen Option : 1

Q.35 Which of the following is NOT a characteristic of the 4th plan of India?

- Ans 1. Implementation of Family Planning Programmes was among the major targets of the Plan.
2. It had twin objectives of "growth with stability" and "progressive achievement of self-reliance".
3. The plan is considered a big success.
4. The influx of Bangladeshi refugees before and after the 1971 Indo-Pak war was an important issue.

Question ID : 264330112897
Option 1 ID : 264330443674
Option 2 ID : 264330443673
Option 3 ID : 264330443676
Option 4 ID : 264330443675
Status : Not Answered
Chosen Option : --

Q.36 'My Days' is an autobiography written by whom among the following authors?

- Ans 1. Vijayantimala
2. RK Narayan
3. Shashi Kapoor
4. Hema Malini

Question ID : 26433064216
Option 1 ID : 264330251458
Option 2 ID : 264330251457
Option 3 ID : 264330251456
Option 4 ID : 264330251459
Status : Not Answered
Chosen Option : --

Q.37 Name the dance of Rajasthan which uses a fake horse ride as a prop.

- Ans 1. Pavri Naach
2. Dindi and Kala
3. Ghode Modni
4. Kacchi Ghodi

Question ID : 264330110429
Option 1 ID : 264330433995
Option 2 ID : 264330433996
Option 3 ID : 264330433993
Option 4 ID : 264330433994
Status : Not Answered
Chosen Option : --

Q.38 Which of the following institutions govern and control the cricket matches?

- Ans 1. FIFA
2. FIDE
3. FIH
4. ICC

Question ID : 264330132555
Option 1 ID : 264330519317
Option 2 ID : 264330519318
Option 3 ID : 264330519316
Option 4 ID : 264330519315
Status : Answered
Chosen Option : 4

Q.39 Kalamandalam Gopi was awarded the Padma Shri for which form of dance?

- Ans 1. Bharatanatyam
 2. Kuchipudi
 3. Kathakali
 4. Kathak

Question ID : 26433074875
Option 1 ID : 264330293589
Option 2 ID : 264330293591
Option 3 ID : 264330293588
Option 4 ID : 264330293590
Status : Answered
Chosen Option : 3

Q.40 Who among the following was the recruiter, caretaker and commander of the Rani of Jhansi Regiment?

- Ans 1. Usha Mehta
 2. Lakshmi Swaminathan
 3. Bhikaji Cama
 4. Sucheta Kriplani

Question ID : 264330130567
Option 1 ID : 264330511380
Option 2 ID : 264330511379
Option 3 ID : 264330511381
Option 4 ID : 264330511382
Status : Not Answered
Chosen Option : --

Q.41 Where did Mangal Pandey refuse to use the greased cartridge?

- Ans 1. Delhi
 2. Kanpur
 3. Meerut
 4. Barrackpore

Question ID : 264330119307
Option 1 ID : 264330467517
Option 2 ID : 264330467518
Option 3 ID : 264330467516
Option 4 ID : 264330467515
Status : Answered
Chosen Option : 4

Q.42 According to Census of India 2011, what was the population density of India?

- Ans 1. 382 person/km²
 2. 384 person/km²
 3. 388 person/km²
 4. 386 person/km²

Question ID : 264330120375
Option 1 ID : 264330471754
Option 2 ID : 264330471752
Option 3 ID : 264330471751
Option 4 ID : 264330471753
Status : Not Answered
Chosen Option : --

Q.43 Which of the following is NOT one of the tax slabs under GST?

- Ans
- 1. 28%
 - 2. 30%
 - 3. 12%
 - 4. 5%

Question ID : 26433059313
Option 1 ID : 264330232130
Option 2 ID : 264330232131
Option 3 ID : 264330232129
Option 4 ID : 264330232128
Status : Answered
Chosen Option : 2

Q.44 On what grounds can a judge of the Supreme Court or High Court be removed from the post?

- Ans
- 1. Incapacity and Political links
 - 2. Only Incapacity
 - 3. Proven misbehaviour and Incapacity
 - 4. Only Proven misbehaviour

Question ID : 264330178758
Option 1 ID : 264330701060
Option 2 ID : 264330701061
Option 3 ID : 264330701062
Option 4 ID : 264330701059
Status : Answered
Chosen Option : 1

Q.45 Who among the following artists received the Padma Shri award in 2021 for his contribution to keep alive the tribal folk dance 'Gussadi'?

- Ans
- 1. Gopal Prasad
 - 2. Padmaja Reddy
 - 3. R Muthukannammal
 - 4. Kanaka Raju

Question ID : 26433011206
Option 1 ID : 264330436909
Option 2 ID : 264330436910
Option 3 ID : 264330436912
Option 4 ID : 264330436911
Status : Not Answered
Chosen Option : --

Q.46 In cricket, the field is oval with a rectangular area in the middle, known as 'pitch', which is _____ wide.

- Ans**
- 1. 22 yards (20.12 m) by 10 feet (3.04 m)
 - 2. 15 yards (15.11 m) by 8 feet (2.04 m)
 - 3. 11 yards (10.97 m) by 9 feet (2.26 m)
 - 4. 13 yards (13.52 m) by 7 feet (1.84 m)

Question ID : 264330113762
Option 1 ID : 264330447135
Option 2 ID : 264330447134
Option 3 ID : 264330447136
Option 4 ID : 264330447133
Status : Answered
Chosen Option : 1

Q.47 Which of the following groups of crops is related to the Kharif season in the northern states of India?

- Ans**
- 1. Jute, Wheat, Pea
 - 2. Wheat, Gram, Rapeseed
 - 3. Rice, Maize, Bajra
 - 4. Barley, Gram, Mustard

Question ID : 264330119778
Option 1 ID : 264330469390
Option 2 ID : 264330469388
Option 3 ID : 264330469389
Option 4 ID : 264330469387
Status : Answered
Chosen Option : 1

Q.48 Which of the following is absent in prokaryotic cells?

- Ans**
- 1. Nuclear membrane
 - 2. Cell wall
 - 3. Cytoplasm
 - 4. Ribosomes

Question ID : 264330117602
Option 1 ID : 264330462434
Option 2 ID : 264330462433
Option 3 ID : 264330462435
Option 4 ID : 264330462436
Status : Answered
Chosen Option : 2

Q.49 Identify the correct statement in the context of National Income Accounting.

- (i) Depreciation is unexpected obsolescence.
- (ii) Capital loss is unexpected obsolescence.
- (iii) Intermediate goods get completely used up or are resold during a given year.

Ans ✓ 1. Only (ii)

✗ 2. Both (i) and (iii)

✗ 3. Only (i)

✗ 4. Only (iii)

Question ID : 264330112894

Option 1 ID : 264330443662

Option 2 ID : 264330443664

Option 3 ID : 264330443661

Option 4 ID : 264330443663

Status : Not Answered

Chosen Option : --

Q.50 Pulakeshin II who defeated Harshavardhana belonged to _____ dynasty.

Ans ✗ 1. Pallava

✓ 2. Chalukya

✗ 3. Chola

✗ 4. Chera

Question ID : 264330119471

Option 1 ID : 264330468167

Option 2 ID : 264330468168

Option 3 ID : 264330468169

Option 4 ID : 264330468170

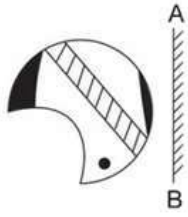
Status : Answered

Chosen Option : 2

Section : Reasoning

Adda247

Q.1 Select the correct mirror image of the given figure when the mirror is placed at 'AB' as shown.




Ans

✗ 1.



✓ 2.



✗ 3.



✗ 4.



Question ID : 264330104136

Option 1 ID : 264330408848

Option 2 ID : 264330408846

Option 3 ID : 264330408845

Option 4 ID : 264330408847

Status : Answered

Chosen Option : 2

Q.2 Which of the following terms will replace the question mark (?) in the given series?

BMRG, FKUF, ?, NGAD, REDC

Ans ✓ 1. JIXE

✗ 2. IMYD

✗ 3. IJXE

✗ 4. JHYD

Question ID : 26433090967

Option 1 ID : 264330357277

Option 2 ID : 264330357280

Option 3 ID : 264330357278

Option 4 ID : 264330357279

Status : Answered

Chosen Option : 1

Q.3 Read the given statements and conclusions carefully. Assuming that the information given in the statements is true, even if it appears to be at variance with commonly known facts, decide which of the given conclusions logically follow(s) from the statements.

Statements:

All mangoes are grapes.

All grapes are guava.

Conclusions:

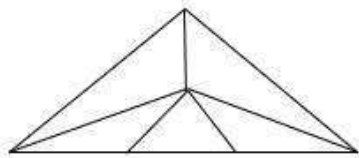
I. Some guavas are grapes.

II. Some grapes are mangoes.

- Ans 1. Both conclusions I and II follow
 2. Only conclusion I follows
 3. Only conclusion II follows
 4. Neither conclusion I nor II follows

Question ID : 26433069510
Option 1 ID : 264330272554
Option 2 ID : 264330272552
Option 3 ID : 264330272553
Option 4 ID : 264330272555
Status : Answered
Chosen Option : 1

Q.4 How many triangles are there in the given figure?



- Ans 1. 8
 2. 6
 3. 9
 4. 10

Question ID : 26433085579
Option 1 ID : 264330336019
Option 2 ID : 264330336018
Option 3 ID : 264330336020
Option 4 ID : 264330336017
Status : Answered
Chosen Option : 3

Q.5 In a certain code language, 'SOLSTICE' is written as 'CEGVUNMU' and 'MAJESTY' is written as 'AVUCLYO'. How will 'INFLUENCE' be written in that language?

- Ans 1. KPHNTGPEG
 2. GEPGWNHOK
 3. GALGTJDLK
 4. CEPCSNHPG

Question ID : 26433092579
Option 1 ID : 264330363607
Option 2 ID : 264330363606
Option 3 ID : 264330363608
Option 4 ID : 264330363605
Status : Answered
Chosen Option : 4

Q.6 1, 2, 3, 4, 5 and 6 are written on different faces of a dice. Three different positions of the same dice are shown below. Find the number on the face opposite to the one showing '2'.

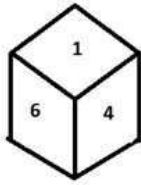


figure 1

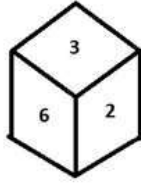


figure 2

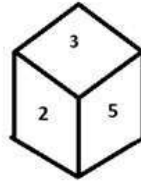


figure 3

- Ans**
- 1. 1
 - 2. 5
 - 3. 3
 - 4. 4

Question ID : 264330110554

Option 1 ID : 264330434495

Option 2 ID : 264330434494

Option 3 ID : 264330434496

Option 4 ID : 264330434493

Status : Answered

Chosen Option : 2

Q.7 Select the correct combination of mathematical signs to sequentially replace the * signs and to balance the given equation.
 $999 * 111 * 67 * 87 * 2 * 116$

- Ans**
- 1. $+ - \times + =$
 - 2. $+ + - \times =$
 - 3. $+ + - \times =$
 - 4. $\div - + \times =$

Question ID : 26433085723

Option 1 ID : 264330336595

Option 2 ID : 264330336596

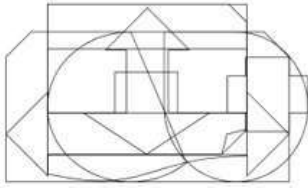
Option 3 ID : 264330336594

Option 4 ID : 264330336593

Status : Answered

Chosen Option : 4

Q.8 Select the option figure which is embedded in the given figure (Rotation is NOT allowed).



Ans

✗ 1.



✗ 2.



✗ 3.



✓ 4.



Question ID : 26433082017

Option 1 ID : 264330321901

Option 2 ID : 264330321902

Option 3 ID : 264330321904

Option 4 ID : 264330321903

Status : Answered

Chosen Option : 4

Q.9 Which figure should replace the question mark (?) if the following series were to be continued?

H	3	□	C	□	D	6	O	A	X	A	□	H	3	C	?
C	O	D	H	3	O	X	3	□	6	O	3	D	O	A	
X	6	A	A	X	6	D	H	C	C	D	H	□	6	X	

Ans

✓ 1.

D	C	A
H	3	O
X	□	6

✗ 2.

□	C	A
H	3	O
D	X	6

✗ 3.

□	6	X
H	3	C
D	O	A

✗ 4.

D	O	3
H	A	C
X	□	6

Question ID : 264330103878

Option 1 ID : 264330407813

Option 2 ID : 264330407816

Option 3 ID : 264330407815

Option 4 ID : 264330407814

Status : Answered

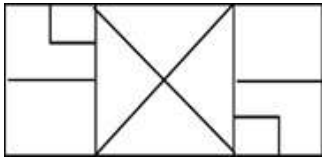
Chosen Option : 1

Q.10 Select the option in which the given figure is embedded (rotation is NOT allowed).

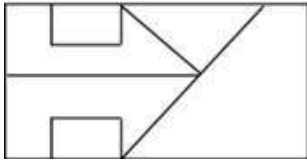


Ans

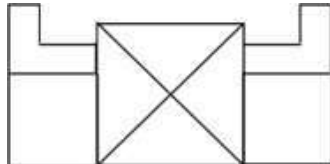
1.



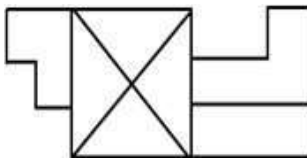
2.



3.



4.



Question ID : 264330111673

Option 1 ID : 264330438779

Option 2 ID : 264330438778

Option 3 ID : 264330438777

Option 4 ID : 264330438780

Status : Answered

Chosen Option : 3

Q.11 P, Q, R, S, T, U and V were sitting in a straight row, facing north. T was to the immediate left of U. V was second to the left of P. Only R was to the right of U. P was exactly between Q and S. Who among the following was at the third position from the left?

Ans 1. S

2. P

3. Q

4. T

Question ID : 26433087021

Option 1 ID : 264330341727

Option 2 ID : 264330341728

Option 3 ID : 264330341726

Option 4 ID : 264330341725

Status : Answered

Chosen Option : 2

Q.12 Study the given pattern carefully and select the number that can replace the question mark (?) in it.

First row - 3, 16, 13

Second row - 25, 625, 650

Third row - 11, 64, ?

(NOTE : Operations should be performed on the whole numbers, without breaking down the numbers into its constituent digits. Eg. 13 – Operations on 13 such as adding /subtracting/multiplying etc. to 13 can be performed. Breaking down 13 into 1 and 3 and then performing mathematical operations on 1 and 3 is not allowed)

Ans 1. 138

2. 167

3. 169

4. 129

Question ID : 26433087331

Option 1 ID : 264330342962

Option 2 ID : 264330342963

Option 3 ID : 264330342964

Option 4 ID : 264330342961

Status : **Not Attempted and
Marked For Review**

Chosen Option : --

Q.13 Select the word-pair that best represents a similar relationship to the one expressed in the pair of words given below.

(The words must be considered as meaningful English words and must not be related to each other based on the number of letters/number of consonants/vowels in the word.)

Water : Hydrology

Ans 1. Book : Reading

2. Chemistry : Chemist

3. Space : Astronomy

4. Monuments : Archaeologist

Question ID : 26433053228

Option 1 ID : 264330208215

Option 2 ID : 264330208217

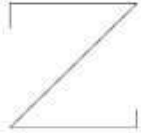
Option 3 ID : 264330208214

Option 4 ID : 264330208216

Status : **Answered**

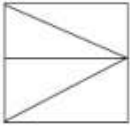
Chosen Option : 3

Q.14 Select the option in which the given figure is embedded (rotation is NOT allowed).

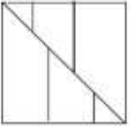


Ans

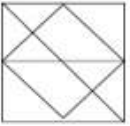
1.




2.



3.



4.



Question ID : 264330114258

Option 1 ID : 264330449118

Option 2 ID : 264330449120

Option 3 ID : 264330449119

Option 4 ID : 264330449117

Status : Answered

Chosen Option : 4

Q.15 Select the correct combination of mathematical signs to sequentially replace the * signs and to balance the given equation.

$$263 * 225 * 5 * 76 * 98 * 3$$

Ans

1. $+ - + \times =$

2. $= - + \times +$

3. $= - + + \times$

4. $= + - + \times$

Question ID : 26433085721

Option 1 ID : 264330336585

Option 2 ID : 264330336588

Option 3 ID : 264330336587

Option 4 ID : 264330336586

Status : Answered

Chosen Option : 4

Q.16 Select the option that is related to the third term in the same way as the second term is related to the first term and the sixth term is related to the fifth term.
2 : 9 :: 8 : ? :: 4 : 65

Ans 1. 513

2. 65

3. 344

4. 511

Question ID : 264330101049

Option 1 ID : 264330396742

Option 2 ID : 264330396741

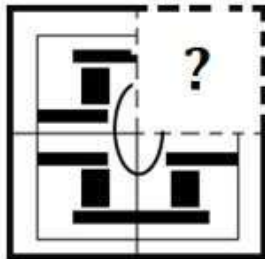
Option 3 ID : 264330396744

Option 4 ID : 264330396743

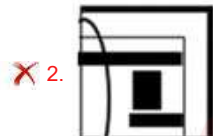
Status : Answered

Chosen Option : 1

Q.17 Select the option figure that will replace the question mark (?) in the figure given below to complete the pattern.



Ans



Question ID : 264330131106

Option 1 ID : 264330513538

Option 2 ID : 264330513535

Option 3 ID : 264330513537

Option 4 ID : 264330513536

Status : Answered

Chosen Option : 4

Q.18 Select the correct mirror image of the given figure when the mirror is placed at PQ as shown below.



- Ans
- ✓ 1. m 2 V ƒ ε 9
 - ✗ 2. m 2 V ƒ ε 9
 - ✗ 3. m 2 ʌ ƒ ε 9
 - ✗ 4. m 5 V ƒ ε 9

Question ID : 26433080772
 Option 1 ID : 264330317024
 Option 2 ID : 264330317022
 Option 3 ID : 264330317023
 Option 4 ID : 264330317021
 Status : Answered
 Chosen Option : 1

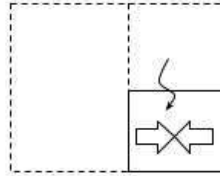
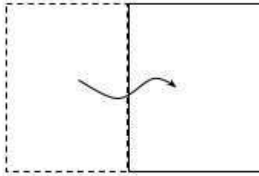
Q.19 Select the correct mirror image of the given figure when the mirror is placed at 'AB' as shown.



- Ans
- ✗ 1. G 7 T C M 4 ↻
 - ✓ 2. ƒ 7 T C M 4 ↻
 - ✗ 3. ƒ 7 T M C 4 ↻
 - ✗ 4. ↻ 4 C M T 7 ƒ

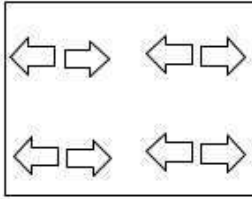
Question ID : 264330114696
 Option 1 ID : 264330450872
 Option 2 ID : 264330450869
 Option 3 ID : 264330450870
 Option 4 ID : 264330450871
 Status : Answered
 Chosen Option : 2

Q.20 A paper is folded and cut as shown below. How will it appear when unfolded?

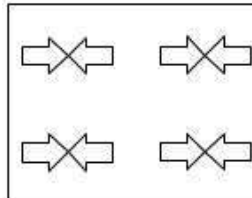


Ans

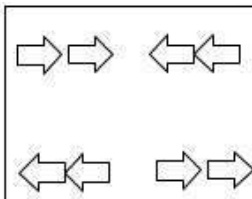
✗ 1.



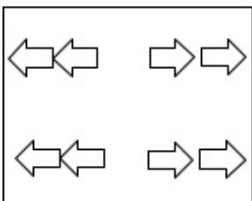
✓ 2.



✗ 3.



✗ 4.



Question ID : 264330118714

Option 1 ID : 264330466109

Option 2 ID : 264330466108

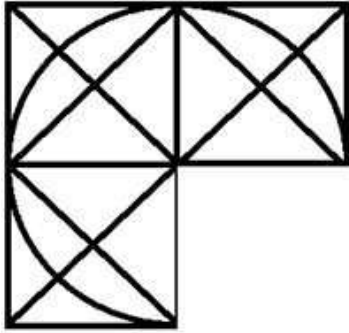
Option 3 ID : 264330466110

Option 4 ID : 264330466107

Status : Answered

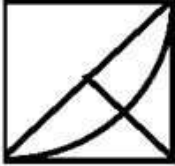
Chosen Option : 2

Q.21 Select the option which when placed in the blank space of the given figure will complete the pattern.



Ans


✗ 1.




✗ 2.



✗ 3.



✓ 4.



Question ID : 264330112986

Option 1 ID : 264330444030

Option 2 ID : 264330444032

Option 3 ID : 264330444029

Option 4 ID : 264330444031

Status : Answered

Chosen Option : 4

Q.22 Which figure should replace the question mark (?) if the series were to be continued?

L O V E R	O V E R A	E O V A R	O V A R T	?
-----------	-----------	-----------	-----------	---

Ans

1. T O V A R

2. V A O T R

3. A O V T R

4. V O T A R

Question ID : 264330130797

Option 1 ID : 264330512299

Option 2 ID : 264330512301

Option 3 ID : 264330512300

Option 4 ID : 264330512302

Status : Answered

Chosen Option : 3

Adda247

Q.23 Select the option in which the given figure is embedded (rotation is NOT allowed).



Ans

✗ 1.



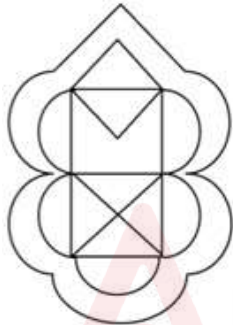
✗ 2.



✗ 3.



✓ 4.



Question ID : 264330114689

Option 1 ID : 264330450841

Option 2 ID : 264330450842

Option 3 ID : 264330450843

Option 4 ID : 264330450844

Status : Answered

Chosen Option : 4

Q.24 Select the number from among the given options that can replace the question mark (?) in the following series.

10, 24, 66, 192, 570, ?

- Ans
- 1. 1500
 - 2. 1699
 - 3. 1704
 - 4. 2353

Question ID : 264330109767

Option 1 ID : 264330431345

Option 2 ID : 264330431346

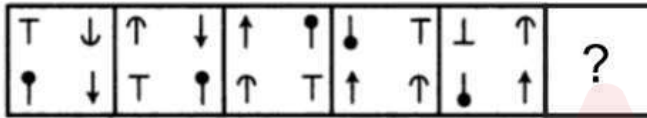
Option 3 ID : 264330431348

Option 4 ID : 264330431347

Status : **Not Attempted and Marked For Review**

Chosen Option : --

Q.25 Select the figure from among the given options that can replace the question mark (?) in the following series.



Ans

- 1.
- 2.
- 3.
- 4.

Question ID : 26433080541

Option 1 ID : 264330316099

Option 2 ID : 264330316100

Option 3 ID : 264330316097

Option 4 ID : 264330316098

Status : **Answered**

Chosen Option : 4

Q.1 In five subjects of equal marks, S gets 45, 78, 36, 65 and 56 in the first semester and 48, 72, 55, 46 and 79 in the second semester. What are his average marks in the first year?

- Ans
- 1. 57
 - 2. 56
 - 3. 58
 - 4. 58.5

Question ID : 264330145284
Option 1 ID : 264330569393
Option 2 ID : 264330569391
Option 3 ID : 264330569392
Option 4 ID : 264330569394
Status : Answered
Chosen Option : 3

Q.2 A garrison of 1500 men has provisions for 11 days. How long will the provisions last if the garrison is increased by 1800 men?

- Ans
- 1. 3 days
 - 2. 6 days
 - 3. 5 days
 - 4. 4 days

Question ID : 264330182582
Option 1 ID : 264330716122
Option 2 ID : 264330716119
Option 3 ID : 264330716120
Option 4 ID : 264330716121
Status : Answered
Chosen Option : 3

Q.3 Shanti while driving her car at a speed of 68 km/h, observes that at some moment a moving bus is 40 m ahead of her car. After 10 sec she finds that she is 60 m ahead of the bus. What is the speed of the bus?

- Ans
- 1. 30 km/h
 - 2. 32 km/h
 - 3. 25 km/h
 - 4. 38 km/h

Question ID : 264330183861
Option 1 ID : 264330721120
Option 2 ID : 264330721121
Option 3 ID : 264330721122
Option 4 ID : 264330721123
Status : Answered
Chosen Option : 2

Q.4 A person promised to pay ₹9,048 to the bank in 5 equal annual instalments at the rate of 8% per annum simple interest. The annual instalment (in ₹) paid is:

- Ans
- 1. 1560
 - 2. 1050
 - 3. 1650
 - 4. 1100

Question ID : 264330119422
Option 1 ID : 264330467976
Option 2 ID : 264330467978
Option 3 ID : 264330467977
Option 4 ID : 264330467975
Status : Answered
Chosen Option : 1

Q.5 The average age of three persons is 54 years and their ages are in the proportion 2 : 3 : 4. Find the age of the youngest person.

- Ans
- 1. 28 years
 - 2. 34 years
 - 3. 36 years
 - 4. 32 years

Question ID : 264330105995
Option 1 ID : 264330416281
Option 2 ID : 264330416283
Option 3 ID : 264330416284
Option 4 ID : 264330416282
Status : Answered
Chosen Option : 3

Q.6 Asha deposits ₹12,500 in a private bank at the rate of 15%, compounded half-yearly. Find the amount Asha earns (in ₹) in $1\frac{1}{2}$ years (rounded off to two decimal places).

- Ans
- 1. 15028.71
 - 2. 15258.71
 - 3. 15528.71
 - 4. 13404.76

Question ID : 264330104261
Option 1 ID : 264330409347
Option 2 ID : 264330409346
Option 3 ID : 264330409345
Option 4 ID : 264330409348
Status : Answered
Chosen Option : 2

Q.7 The greatest number that exactly divides 126, 198 and 162 is:

Ans 1. 18

2. 27

3. 9

4. 81

Question ID : 264330111427

Option 1 ID : 264330437795

Option 2 ID : 264330437794

Option 3 ID : 264330437793

Option 4 ID : 264330437796

Status : Answered

Chosen Option : 1

Q.8 Pihu buys a chocolate for ₹225 and sells it for ₹300. What will be her gain percentage?
(Rounded off to two decimal places)

Ans 1. 33.33%

2. 28.25%

3. 30.35%

4. 25.58%

Question ID : 264330119195

Option 1 ID : 264330467067

Option 2 ID : 264330467070

Option 3 ID : 264330467069

Option 4 ID : 264330467068

Status : Answered

Chosen Option : 1

Q.9 The areas of two similar triangles are 48 cm^2 and 156 cm^2 . If the height of the smaller triangle is 6 cm, then the corresponding height (in cm) of the bigger triangle is:

Ans 1. $\sqrt{118}$

2. $\sqrt{117}$

3. $\sqrt{119}$

4. $\sqrt{121}$

Question ID : 264330119363

Option 1 ID : 264330467739

Option 2 ID : 264330467741

Option 3 ID : 264330467742

Option 4 ID : 264330467740

Status : Not Attempted and
Marked For Review

Chosen Option : --

Q.10 If a number P is 15% less than another number Q, and Q is 12% more than 156, then what is the value of P?

- Ans
- 1. 168.52
 - 2. 138.52
 - 3. 148.51
 - 4. 178.52

Question ID : 264330118414
Option 1 ID : 264330465059
Option 2 ID : 264330465057
Option 3 ID : 264330465058
Option 4 ID : 264330465060
Status : Answered
Chosen Option : 3

Q.11 The sum of three distinct prime numbers is 44. What is the largest possible prime number?

- Ans
- 1. 37
 - 2. 31
 - 3. 41
 - 4. 43

Question ID : 264330111448
Option 1 ID : 264330437879
Option 2 ID : 264330437880
Option 3 ID : 264330437877
Option 4 ID : 264330437878
Status : Answered
Chosen Option : 1

Q.12 A person got a new chair at 35% discount. Had he got no discount, he would have had to pay ₹224 more. What is the marked price (in ₹) of the chair?

- Ans
- 1. 735
 - 2. 640
 - 3. 600
 - 4. 750

Question ID : 264330119407
Option 1 ID : 264330467918
Option 2 ID : 264330467915
Option 3 ID : 264330467916
Option 4 ID : 264330467917
Status : Answered
Chosen Option : 2

Q.13 The price of sugar goes up by 25%. By how much percentage must a family reduce their consumption of sugar so that the expenditure on sugar remains the same?

- Ans
- 1. 25%
 - 2. 26%
 - 3. 23%
 - 4. 20%

Question ID : 264330104286
Option 1 ID : 264330409447
Option 2 ID : 264330409448
Option 3 ID : 264330409446
Option 4 ID : 264330409445
Status : Answered
Chosen Option : 4

Q.14 The HCF of 0.0006, 0.006, 0.06, 0.6 and 6 is:

- Ans
- 1. 0.6
 - 2. 0.06
 - 3. 6
 - 4. 0.0006

Question ID : 264330103576
Option 1 ID : 264330406611
Option 2 ID : 264330406610
Option 3 ID : 264330406612
Option 4 ID : 264330406609
Status : Answered
Chosen Option : 3

Q.15 The radius of the base of a conical tent is 20 feet and the slant height of the cone is 35 feet. Find the area (in square feet) of the canvas that is required for making this tent. Ignore the wastage of canvas.

(Use $\pi = \frac{22}{7}$)

- Ans
- 1. 2150
 - 2. 2200
 - 3. 2175
 - 4. 2225

Question ID : 264330109542
Option 1 ID : 264330430445
Option 2 ID : 264330430447
Option 3 ID : 264330430446
Option 4 ID : 264330430448
Status : Answered
Chosen Option : 2

Q.1 In MS word 365, While working with the text the thesaurus tool is used for:

- Ans
- 1. finding repeated words in the document
 - 2. corrects misspelling word
 - 3. correct the format of the text
 - 4. check for synonyms and antonyms

Question ID : 264330175975
Option 1 ID : 264330690195
Option 2 ID : 264330690196
Option 3 ID : 264330690197
Option 4 ID : 264330690198
Status : Answered
Chosen Option : 4

Q.2 What feature in Microsoft Word 365 allows you to create a numbered list with different levels of indentation?

- Ans
- 1. Multi-hierarchy numbering
 - 2. Multi-indenting numbering
 - 3. Multilevel numbering
 - 4. Multi-spaced numbering

Question ID : 264330177669
Option 1 ID : 264330696794
Option 2 ID : 264330696792
Option 3 ID : 264330696791
Option 4 ID : 264330696793
Status : Answered
Chosen Option : 2

Q.3 In MS Excel 365 how can you add a specific number of days to a date in Excel?

- Ans
- 1. Using the EDATE function
 - 2. Using the WORKDAY function
 - 3. Using the DAY function
 - 4. Using the DATE function

Question ID : 264330177667
Option 1 ID : 264330696784
Option 2 ID : 264330696786
Option 3 ID : 264330696785
Option 4 ID : 264330696783
Status : Not Attempted and Marked For Review
Chosen Option : --

Q.4 In MS Excel 365, Which of the following charts in MS Excel shows the change of magnitude over a period of time?

- Ans
- 1. Line chart
 - 2. Area chart
 - 3. Bar chart
 - 4. Pie chart

Question ID : 264330180404
Option 1 ID : 264330707584
Option 2 ID : 264330707583
Option 3 ID : 264330707586
Option 4 ID : 264330707585
Status : Answered
Chosen Option : 1

Q.5 Which of the following options allows you to change page orientation in MS Word 365?

- Ans
- 1. Paragraph alignment
 - 2. Margins
 - 3. Page layout
 - 4. Page break

Question ID : 264330176706
Option 1 ID : 264330693042
Option 2 ID : 264330693041
Option 3 ID : 264330693040
Option 4 ID : 264330693039
Status : Answered
Chosen Option : 3

Q.6 Which of the following keyboard shortcut keys is used to copy the selected text in MS-Word 365?

- Ans
- 1. Ctrl + X
 - 2. Ctrl + V
 - 3. Ctrl + C
 - 4. Ctrl + P

Question ID : 264330178288
Option 1 ID : 264330699209
Option 2 ID : 264330699208
Option 3 ID : 264330699207
Option 4 ID : 264330699210
Status : Answered
Chosen Option : 3

Q.7 In MS Excel 365, the VLOOKUP function in Microsoft Excel is primarily used for:

- Ans
- 1. searching for a value in a table and returning a corresponding value
 - 2. finding the total of a range
 - 3. creating pivot tables
 - 4. calculating percentages

Question ID : 264330180693
Option 1 ID : 264330708742
Option 2 ID : 264330708741
Option 3 ID : 264330708739
Option 4 ID : 264330708740
Status : Answered
Chosen Option : 1

Q.8 Which of the following statements is FALSE regarding attaching a file in an email?

- Ans
- 1. The size of the attachment is unlimited.
 - 2. Attachments can be previewed within the email composition window.
 - 3. You can remove or change attachments before sending the email.
 - 4. Multiple files can be attached in an email message.

Question ID : 264330173548
Option 1 ID : 264330680671
Option 2 ID : 264330680674
Option 3 ID : 264330680673
Option 4 ID : 264330680672
Status : Answered
Chosen Option : 1

Q.9 Which of the following is an example of internet service provider?

- Ans 1. Outlook
 2. Airtel
 3. Google
 4. Mozilla

Question ID : 264330178592
Option 1 ID : 264330700396
Option 2 ID : 264330700395
Option 3 ID : 264330700397
Option 4 ID : 264330700398
Status : Answered
Chosen Option : 2

Q.10 Which of the following is the purpose of the "Zoom" icon in Microsoft Word 365?

- Ans 1. To delete the current page
 2. To adjust the visual appearance of our document to suit our reading or editing needs
 3. To increase the font size
 4. To change the document's page layout

Question ID : 264330182790
Option 1 ID : 264330716934
Option 2 ID : 264330716933
Option 3 ID : 264330716931
Option 4 ID : 264330716932
Status : Answered
Chosen Option : 2

Adda247

Constable Executive Male and Female in Delhi Police Examination 2023

Roll Number	
Candidate Name	
Venue Name	iON Digital Zone iDZ Trinity 2
Exam Date	01/12/2023
Exam Time	12:00 PM - 1:30 PM
Subject	Constable Executive Male and Female in Delhi Police Examination 2023

Section : **General Knowledge**

Q.1 When the sun, the moon and the earth are in a straight line, the height of the tide will be higher. What are these tides called?

- Ans
- 1. Spring tides
 - 2. Autumn tides
 - 3. Neap tides
 - 4. Diurnal tide

Question ID : 264330134908
Option 1 ID : 264330528567
Option 2 ID : 264330528570
Option 3 ID : 264330528568
Option 4 ID : 264330528569
Status : Not Answered
Chosen Option : --

Q.2 Bhangra dance is commonly performed in which of these states?

- Ans
- 1. Maharashtra
 - 2. Uttar Pradesh
 - 3. Chhattisgarh
 - 4. Punjab

Question ID : 264330109285
Option 1 ID : 264330429417
Option 2 ID : 264330429420
Option 3 ID : 264330429418
Option 4 ID : 264330429419
Status : Answered
Chosen Option : 4

Q.3 The goal of Saansad Adarsh Gram Yojana was to develop _____ Adarsh Grams by March 2019.

- Ans
- 1. four
 - 2. three
 - 3. five
 - 4. two

Question ID : 264330119219
Option 1 ID : 264330467164
Option 2 ID : 264330467166
Option 3 ID : 264330467165
Option 4 ID : 264330467163
Status : Not Answered
Chosen Option : --

Q.4 Which of the following architectural features/structures was NOT a part of the citadel in Mohenjo-Daro?

- Ans
- 1. Great Courtyard
 - 2. Warehouse
 - 3. Residential Buildings
 - 4. Pillared Hall

Question ID : 264330165325
Option 1 ID : 264330648380
Option 2 ID : 264330648381
Option 3 ID : 264330648382
Option 4 ID : 264330648379
Status : Answered
Chosen Option : 4

Q.5 Posthumus Padma awardee in 2022, Gosaveedu Shalik Hassan was a renowned player of the _____.

- Ans
- 1. Guitar
 - 2. Sitar
 - 3. Nadaswaram
 - 4. Veena

Question ID : 264330111951
Option 1 ID : 264330439891
Option 2 ID : 264330439889
Option 3 ID : 264330439892
Option 4 ID : 264330439890
Status : Not Answered
Chosen Option : --

Q.6 In Karate, which word is used to denote 'Punch'?

- Ans
- 1. Waza-ari
 - 2. Tsuki
 - 3. Seiri
 - 4. Ippon

Question ID : 264330117801
Option 1 ID : 264330463019
Option 2 ID : 264330463020
Option 3 ID : 264330463022
Option 4 ID : 264330463021
Status : Not Answered
Chosen Option : --

Q.7 Which of the following fungus is used in fermentation technology?

- Ans
- 1. Rhizobium
 - 2. Molds
 - 3. Saccharomyces
 - 4. Smuts

Question ID : 264330118028
Option 1 ID : 264330463928
Option 2 ID : 264330463930
Option 3 ID : 264330463927
Option 4 ID : 264330463929
Status : Answered
Chosen Option : 2

Q.8 As per Article 170 of the Constitution of India, the Legislative Assembly of each State shall consist of NOT more than _____ and not less than 60 members.

- Ans
- 1. 400
 - 2. 500
 - 3. 550
 - 4. 600

Question ID : 264330110630
Option 1 ID : 264330434797
Option 2 ID : 264330434798
Option 3 ID : 264330434799
Option 4 ID : 264330434800
Status : Answered
Chosen Option : 2

Q.9 Which of the following elements is NOT related to the Trade and Investment Policy Reforms?

- Ans
- 1. Dismantling of quantitative restrictions on imports and exports
 - 2. Reduction of tariff rates
 - 3. Removal of licensing for imports
 - 4. Increase in export duties

Question ID : 264330111601
Option 1 ID : 264330438489
Option 2 ID : 264330438490
Option 3 ID : 264330438492
Option 4 ID : 264330438491
Status : Answered
Chosen Option : 3

Q.10 The process of privatisation covers three sets of measures. Which of the following is NOT one of those?

- Ans
- 1. Operational measures
 - 2. Ownership measures
 - 3. Organisational measures
 - 4. Accounting measures

Question ID : 264330112512
Option 1 ID : 264330442136
Option 2 ID : 264330442133
Option 3 ID : 264330442134
Option 4 ID : 264330442135
Status : Answered
Chosen Option : 4

Q.11 The author of Prayag Prashasti, Harisena, was the court poet of whom among the following Gupta rulers?

- Ans 1. Samudragupta
 2. Purugupta
 3. Sri Gupta
 4. Kumaragupta

Question ID : 264330182692
Option 1 ID : 264330716541
Option 2 ID : 264330716539
Option 3 ID : 264330716540
Option 4 ID : 264330716542
Status : Answered
Chosen Option : 1

Q.12 In medieval architecture, Sarais are places used for _____.

- Ans 1. warfare practice
 2. hospitals
 3. temporary accommodation
 4. warehouses

Question ID : 264330109648
Option 1 ID : 264330430870
Option 2 ID : 264330430872
Option 3 ID : 264330430869
Option 4 ID : 264330430871
Status : Not Answered
Chosen Option : --

Q.13 Which country is the host of the 2023 ODI Cricket World Cup event?

- Ans 1. Bangladesh
 2. India
 3. Sri Lanka
 4. Australia

Question ID : 264330176083
Option 1 ID : 264330690628
Option 2 ID : 264330690629
Option 3 ID : 264330690630
Option 4 ID : 264330690627
Status : Answered
Chosen Option : 2

Q.14 Which of the following statements is INCORRECT about the an earthquake?

- Ans 1. An earthquake is shaking of the earth.
 2. An earthquake is caused due to release of energy.
 3. An earthquake is a natural event.
 4. An earthquake creates waves that spread in one direction.

Question ID : 264330116374
Option 1 ID : 264330457581
Option 2 ID : 264330457582
Option 3 ID : 264330457584
Option 4 ID : 264330457583
Status : Answered
Chosen Option : 2

Q.15 In 2022, which sports organisation in India implemented equal match fees for both men and women players?

- Ans
- 1. All India Tennis Association
 - 2. Boxing Federation of India
 - 3. Board of Control for Cricket in India
 - 4. All India Football Federation

Question ID : 264330113773
Option 1 ID : 264330447179
Option 2 ID : 264330447177
Option 3 ID : 264330447180
Option 4 ID : 264330447178
Status : Answered
Chosen Option : 2

Q.16 Which of the following is NOT a component of the Green Revolution?

- Ans
- 1. Fertilisers
 - 2. Pesticides
 - 3. Mining
 - 4. HYV Seeds

Question ID : 264330110178
Option 1 ID : 264330432990
Option 2 ID : 264330432991
Option 3 ID : 264330432989
Option 4 ID : 264330432992
Status : Answered
Chosen Option : 3

Q.17 Identify the 'last-living' Sadir dancer who received the Padma Shri in 2022.

- Ans
- 1. R Muthukannammal
 - 2. K Sashimoni
 - 3. B Saraswathi
 - 4. S Mahananda

Question ID : 264330111207
Option 1 ID : 264330436913
Option 2 ID : 264330436914
Option 3 ID : 264330436915
Option 4 ID : 264330436916
Status : Not Answered
Chosen Option : --

Q.18 Which age group of children was considered to find the child sex ratio in Census 2011?

- Ans
- 1. 2 to 5 years
 - 2. 0 to 6 years
 - 3. 0 to 4 years
 - 4. 2 to 6 years

Question ID : 264330183030
Option 1 ID : 264330717854
Option 2 ID : 264330717853
Option 3 ID : 264330717852
Option 4 ID : 264330717855
Status : Answered
Chosen Option : 2

Q.19 According to the Indian Policy Resolution 1956, which of the following industries is a part of schedule A category?

- Ans
- 1. Textile industry
 - 2. Synthetic rubber
 - 3. Mining
 - 4. Fertiliser

Question ID : 264330131504
Option 1 ID : 264330515122
Option 2 ID : 264330515120
Option 3 ID : 264330515119
Option 4 ID : 264330515121
Status : Not Answered
Chosen Option : --

Q.20 Which of the following Articles of the Indian Constitution mentions that 'Untouchability' is abolished and its practice in any form is forbidden?

- Ans
- 1. Article 13
 - 2. Article15
 - 3. Article19
 - 4. Article17

Question ID : 264330180045
Option 1 ID : 264330706163
Option 2 ID : 264330706164
Option 3 ID : 264330706166
Option 4 ID : 264330706165
Status : Answered
Chosen Option : 4

Q.21 'The Truths We Hold: An American Journey' is an autobiography of which political leader?

- Ans
- 1. Kamala Harris
 - 2. Elise Stefanik
 - 3. Alexandria Ocasio-Cortez
 - 4. Drew Zachary

Question ID : 26433053437
Option 1 ID : 264330209051
Option 2 ID : 264330209052
Option 3 ID : 264330209050
Option 4 ID : 264330209053
Status : Not Answered
Chosen Option : --

Q.22 Which of the following is a low power (30 kW) research reactor fuelled by uranium-233?

- Ans
- 1. SHAURYA
 - 2. PRANASH
 - 3. KAMINI
 - 4. MAITRI

Question ID : 264330141662
Option 1 ID : 264330554968
Option 2 ID : 264330554969
Option 3 ID : 264330554970
Option 4 ID : 264330554967
Status : Not Answered
Chosen Option : --

Q.23 Identify the Sultan of the Delhi Sultanate who constructed a new garrison town named Siri for his soldiers.

- Ans
- 1. Bahlul Lodi
 - 2. Muhammad Tughluq
 - 3. Alauddin Khalji
 - 4. Shamsuddin Iltutmish

Question ID : 264330182263
Option 1 ID : 264330714877
Option 2 ID : 264330714876
Option 3 ID : 264330714875
Option 4 ID : 264330714878
Status : Answered
Chosen Option : 3

Q.24 The Manipuri dance of north-eastern India is grown out of the ritual worship of Lord _____.

- Ans
- 1. Vishnu
 - 2. Krishna
 - 3. Ganesha
 - 4. Rama

Question ID : 264330106182
Option 1 ID : 264330417029
Option 2 ID : 264330417032
Option 3 ID : 264330417031
Option 4 ID : 264330417030
Status : Answered
Chosen Option : 1

Q.25 'A Shot at History: My Obsessive Journey to Olympic Gold', is the autobiography of which of the following Olympian?

- Ans
- 1. Major Dhyan Chand
 - 2. Avani Lekhara
 - 3. Neeraj Chopra
 - 4. Abhinav Bindra

Question ID : 264330112857
Option 1 ID : 264330443516
Option 2 ID : 264330443513
Option 3 ID : 264330443514
Option 4 ID : 264330443515
Status : Answered
Chosen Option : 4

Q.26 Which of the following is the characteristic of the Indian Constitution?

- Ans
- 1. Smallest constitution
 - 2. Rigid as well as flexible
 - 3. Multiple citizenship
 - 4. Presidential form of Government

Question ID : 264330118522
Option 1 ID : 264330465489
Option 2 ID : 264330465491
Option 3 ID : 264330465492
Option 4 ID : 264330465490
Status : Answered
Chosen Option : 2

Q.27 Which of the following increased the legal age of marriage for girls from 10 years to 12 years in British India?

- Ans
- 1. Hindu Widows Remarriage Act of 1856
 - 2. Pitt's India Act of 1784
 - 3. Government of India Act of 1935
 - 4. Age of Consent Bill, 1891

Question ID : 264330119745
Option 1 ID : 264330469255
Option 2 ID : 264330469256
Option 3 ID : 264330469257
Option 4 ID : 264330469258
Status : Not Answered
Chosen Option : --

Q.28 What was the maximum limit of Statutory Liquidity Ratio (SLR) that was recommended by the Narasimhan Committee?

- Ans
- 1. 35%
 - 2. 25%
 - 3. 22%
 - 4. 15%

Question ID : 264330130657
Option 1 ID : 264330511739
Option 2 ID : 264330511741
Option 3 ID : 264330511740
Option 4 ID : 264330511742
Status : Not Answered
Chosen Option : --

Q.29 Which Indian music composer received his second Grammy in the 'Best New Age Album' category for his 14th studio album 'Divine Tides', which he shared with American musician and composer Stewart Copeland at the 2022 Grammy Awards?

- Ans
- 1. Ricky Kej
 - 2. Mithoon
 - 3. Harris Jayaraj
 - 4. Devi Sri Prasad

Question ID : 264330113240
Option 1 ID : 264330445045
Option 2 ID : 264330445046
Option 3 ID : 264330445048
Option 4 ID : 264330445047
Status : Answered
Chosen Option : 1

Q.30 In which year did plague strike Bombay?

- Ans
- 1. 1892
 - 2. 1893
 - 3. 1896
 - 4. 1894

Question ID : 264330120149
Option 1 ID : 264330470851
Option 2 ID : 264330470852
Option 3 ID : 264330470854
Option 4 ID : 264330470853
Status : Not Answered
Chosen Option : --

Q.31 The early Delhi Sultans, were preferring to appoint (in administration) their special slaves purchased for military service, called bandagan in _____ language.

- Ans
- 1. Urdu
 - 2. Arabic
 - 3. Persian
 - 4. Sanskrit

Question ID : 264330114077
Option 1 ID : 264330448394
Option 2 ID : 264330448395
Option 3 ID : 264330448393
Option 4 ID : 264330448396
Status : Answered
Chosen Option : 3

Q.32 Privatisation implies _____ a government owned enterprise.

- Ans
- 1. shedding of the ownership or management of
 - 2. strengthening the management of
 - 3. restricting private players from managing
 - 4. restricting private players to take control of

Question ID : 264330110023
Option 1 ID : 264330432371
Option 2 ID : 264330432372
Option 3 ID : 264330432369
Option 4 ID : 264330432370
Status : Answered
Chosen Option : 1

Q.33 What is the common name of the class of red algae?

- Ans
- 1. Chlorophyceae
 - 2. Xanthophyceae
 - 3. Rhodophyceae
 - 4. Phaeophyceae

Question ID : 264330113317
Option 1 ID : 264330445353
Option 2 ID : 264330445356
Option 3 ID : 264330445355
Option 4 ID : 264330445354
Status : Not Answered
Chosen Option : --

Q.34 The Guptas were believed to have sprung from which varna?

- Ans
- 1. Kshatriya
 - 2. Brahman
 - 3. Vaisya
 - 4. Shudra

Question ID : 264330134582
Option 1 ID : 264330527284
Option 2 ID : 264330527283
Option 3 ID : 264330527285
Option 4 ID : 264330527286
Status : Answered
Chosen Option : 1

Q.35 Which festival was initiated by Shivaji, in his reign, to channelise the patriotic spirit of Hindus?

- Ans
- 1. Ram Navami
 - 2. Durga Pooja
 - 3. Karva Chauth
 - 4. Ganesh Chaturthi

Question ID : 264330132770
Option 1 ID : 264330520177
Option 2 ID : 264330520176
Option 3 ID : 264330520175
Option 4 ID : 264330520178
Status : Answered
Chosen Option : 1

Q.36 Which is the highest court of appeal in India?

- Ans
- 1. Lok Adalat
 - 2. District Court
 - 3. High Court
 - 4. Supreme Court of India

Question ID : 264330169057
Option 1 ID : 264330663034
Option 2 ID : 264330663033
Option 3 ID : 264330663032
Option 4 ID : 264330663031
Status : Answered
Chosen Option : 4

Q.37 Who among the following attended all the three Round Table Conferences held in London?

- Ans 1. Sarojini Naidu
 2. Tej Bahadur Sapru
 3. Mahatma Gandhi
 4. Rajendra Prasad

Question ID : 264330114874
Option 1 ID : 264330451581
Option 2 ID : 264330451582
Option 3 ID : 264330451583
Option 4 ID : 264330451584
Status : Answered
Chosen Option : 1

Q.38 Among the following industries, the promotion of one industry is part of the directive principle of state policy of our Constitution and that industry is _____.

- Ans 1. fertiliser industry
 2. cottage industry
 3. automobile industry
 4. steel industry

Question ID : 264330109840
Option 1 ID : 264330431640
Option 2 ID : 264330431637
Option 3 ID : 264330431639
Option 4 ID : 264330431638
Status : Not Answered
Chosen Option : --

Q.39 Which of the following statements about the Mitochondria is INCORRECT?

- Ans 1. ATP generating chemical reactions get enhanced by the deeply folded surface area of the mitochondria.
 2. The body uses energy stored in ATP for making new chemical compounds and for mechanical work.
 3. Mitochondria have two membrane coverings.
 4. Mitochondria are not capable of making their own proteins.

Question ID : 264330177330
Option 1 ID : 264330695513
Option 2 ID : 264330695514
Option 3 ID : 264330695511
Option 4 ID : 264330695512
Status : Answered
Chosen Option : 3

Q.40 Which of the following languages is NOT in the top 3 most spoken native languages of India (as of 2021)?

- Ans 1. Telugu
 2. Hindi
 3. Bengali
 4. Marathi

Question ID : 264330120330
Option 1 ID : 264330471572
Option 2 ID : 264330471571
Option 3 ID : 264330471574
Option 4 ID : 264330471573
Status : Answered
Chosen Option : 3

Q.41 What is the distance from the lower edge of the crossbar of a football goal to the ground?

- Ans 1. 10 feet
 2. 11 feet
 3. 8 feet
 4. 9 feet

Question ID : 264330118909
Option 1 ID : 264330466293
Option 2 ID : 264330466294
Option 3 ID : 264330466291
Option 4 ID : 264330466292
Status : Not Answered
Chosen Option : --

Q.42 How many crop varieties with special traits like climate resilience and high nutrient content were launched in 2021 in India?

- Ans 1. 45
 2. 25
 3. 35
 4. 40

Question ID : 264330120358
Option 1 ID : 264330471686
Option 2 ID : 264330471683
Option 3 ID : 264330471684
Option 4 ID : 264330471685
Status : Not Answered
Chosen Option : --

Q.43 The Gangaur festival of Rajasthan starts and ends on which days as per the Hindu calendar?

- Ans
- 1. First day of Phalgun (Krishna)-Third day of Phalgun (Shukla)
 - 2. First day of Jyeshtha (Krishna)-Third day of Jyeshtha (Shukla)
 - 3. First day of Ashadh (Krishna)-Third day of Ashadh (Shukla)
 - 4. First day of Chaitra (Krishna)-Third day of Chaitra (Shukla)

Question ID : 264330110465
Option 1 ID : 264330434138
Option 2 ID : 264330434140
Option 3 ID : 264330434139
Option 4 ID : 264330434137
Status : Not Answered
Chosen Option : --

Q.44 Which of the following refers to 'net indirect taxes'?

- Ans
- 1. Direct taxes – subsidies
 - 2. Direct Taxes + subsidies
 - 3. Indirect taxes + subsidies
 - 4. Indirect taxes – subsidies

Question ID : 264330110164
Option 1 ID : 264330432935
Option 2 ID : 264330432936
Option 3 ID : 264330432933
Option 4 ID : 264330432934
Status : Answered
Chosen Option : 1

Q.45 Which river in the Himalayas flows parallel to the Ganga as a right-bank tributary?

- Ans
- 1. Ghaghara
 - 2. Gandak
 - 3. Yamuna
 - 4. Kosi

Question ID : 264330176009
Option 1 ID : 264330690332
Option 2 ID : 264330690334
Option 3 ID : 264330690331
Option 4 ID : 264330690333
Status : Answered
Chosen Option : 3

Q.46 As per census 2011, which of the following states recorded the lowest female literacy rate?

- Ans
- 1. Kerala
 - 2. Haryana
 - 3. Rajasthan
 - 4. Bihar

Question ID : 264330179556
Option 1 ID : 264330704223
Option 2 ID : 264330704226
Option 3 ID : 264330704225
Option 4 ID : 264330704224
Status : Answered
Chosen Option : 2

Q.47 Articles 36-51 of the Constitution of India pertain to _____.

- Ans
- 1. Fundamental Duties
 - 2. Directive Principles of State Policy
 - 3. Fundamental Rights
 - 4. The Union

Question ID : 264330130682
Option 1 ID : 264330511841
Option 2 ID : 264330511840
Option 3 ID : 264330511839
Option 4 ID : 264330511842
Status : Answered
Chosen Option : 2

Q.48 Who among the following was the founder of Al-Hilal newspaper during British India?

- Ans
- 1. Hasrat Mohani
 - 2. Mohammad Ajmal Khan
 - 3. Maulana Abul Kalam Azad
 - 4. Syed Hasan Imam

Question ID : 264330120266
Option 1 ID : 264330471320
Option 2 ID : 264330471322
Option 3 ID : 264330471319
Option 4 ID : 264330471321
Status : Not Answered
Chosen Option : --

Q.49 _____ empowers the President to remove inconsistencies between laws passed by the Parliament and State Legislatures and the subjects included in the concurrent list.

- Ans
- 1. Article 259
 - 2. Article 254
 - 3. Article 253
 - 4. Article 250

Question ID : 264330134575
Option 1 ID : 264330527256
Option 2 ID : 264330527258
Option 3 ID : 264330527257
Option 4 ID : 264330527255
Status : Not Answered
Chosen Option : --

Q.50 Sitara Devi was a dancer of the popular North Indian classical dance form _____.

- Ans
- 1. Manipuri
 - 2. Kathakali
 - 3. Kathak
 - 4. Sattriya

Question ID : 264330111793
Option 1 ID : 264330439260
Option 2 ID : 264330439258
Option 3 ID : 264330439259
Option 4 ID : 264330439257
Status : Not Answered
Chosen Option : --

Q.1 Select the correct mirror image of the given figure when the mirror is placed at PQ as shown below.



- Ans
- ✓ 1. 1. **B V 5 c d Z**
 - ✗ 2. 2. **Z b c q 2 V 8**
 - ✗ 3. 3. **B V 5 c d Z**
 - ✗ 4. 4. **B V 5 c d Z**

Question ID : 26433080778

Option 1 ID : 264330317046

Option 2 ID : 264330317047

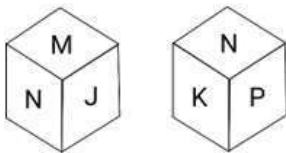
Option 3 ID : 264330317048

Option 4 ID : 264330317045

Status : Answered

Chosen Option : 1

Q.2 Six letters J, K, L, M, N and P are written on different faces of a dice. Two positions of this dice are shown in the figure. Find the letter on the face opposite to 'L'.



- Ans
- ✗ 1. P
 - ✗ 2. K
 - ✗ 3. M
 - ✓ 4. N

Question ID : 26433080636

Option 1 ID : 264330316480

Option 2 ID : 264330316479

Option 3 ID : 264330316478

Option 4 ID : 264330316477

Status : Answered

Chosen Option : 4

Q.3 Select the set in which the numbers are related in the same way as are the numbers of the following sets.

(NOTE: Operations should be performed on the whole numbers, without breaking down the numbers into its constituent digits. E.g. 13 – Operations on 13 such as adding/deleting/multiplying etc. to 13 can be performed. Breaking down 13 into 1 and 3 and then performing mathematical operations on 1 and 3 is not allowed)

(5, 23, 74)
(8, 62, 191)

Ans 1. (7, 47, 146)

2. (10, 98, 289)

3. (4, 14, 46)

4. (3, 11, 38)

Question ID : 26433052101

Option 1 ID : 264330203707

Option 2 ID : 264330203709

Option 3 ID : 264330203706

Option 4 ID : 264330203708

Status : Answered

Chosen Option : 1

Q.4 Select the correct combination of mathematical signs to sequentially replace the * signs and to balance the given equation.

$225 * 25 * 3 * 3 * 6 * 6$

Ans 1. $+ * = - +$

2. $+ * + - =$

3. $+ = * - +$

4. $+ * - + =$

Question ID : 26433085718

Option 1 ID : 264330336575

Option 2 ID : 264330336576

Option 3 ID : 264330336574

Option 4 ID : 264330336573

Status : Answered

Chosen Option : 3

Q.5 Six numbers 11, 12, 42, 16, 24 and 33 are written on different faces of a dice. Two positions of this dice are shown in the figure. Find the number on the face opposite to 24.



Ans 1. 33

2. 16

3. 11

4. 12

Question ID : 264330129791

Option 1 ID : 264330508396

Option 2 ID : 264330508395

Option 3 ID : 264330508397

Option 4 ID : 264330508398

Status : Answered

Chosen Option : 1

Q.6 Select the option that is related to the third word in the same way as the second word is related to the first word. (The words must be considered as meaningful English words and must NOT be related to each other based on the number of letters/number of consonants/vowels in the word)
Synagogue : Religion :: Court : ?

- Ans
- 1. Minister
 - 2. Law
 - 3. Judge
 - 4. Advocate

Question ID : 26433081986
Option 1 ID : 264330321780
Option 2 ID : 264330321779
Option 3 ID : 264330321778
Option 4 ID : 264330321777
Status : Answered
Chosen Option : 2

Q.7 Select the number from among the given options that can replace the question mark (?) in the following series.
5, 15, 23, 29, ?, 35

- Ans
- 1. 32
 - 2. 33
 - 3. 30
 - 4. 31

Question ID : 264330111627
Option 1 ID : 264330438595
Option 2 ID : 264330438593
Option 3 ID : 264330438596
Option 4 ID : 264330438594
Status : Answered
Chosen Option : 2

Q.8 Read the given statements and conclusions carefully. Assuming that the information given in the statements is true, even if it appears to be at variance with commonly known facts, decide which of the given conclusions logically follow(s) from the statements.

Statements:

Some reds are blues.

All blues are greens.

Conclusions:

I. Some reds are greens.

II. Some greens are reds.

- Ans
- 1. Neither conclusion I nor II follows
 - 2. Both conclusions I and II follow
 - 3. Only conclusion I follows
 - 4. Only conclusion II follows

Question ID : 26433068288
Option 1 ID : 264330267667
Option 2 ID : 264330267666
Option 3 ID : 264330267664
Option 4 ID : 264330267665
Status : Answered
Chosen Option : 2

Q.9 Select the option that is related to the fourth number in the same way as the first number is related to the second number and the fifth number is related to the sixth number.

157 : 13 :: ? : 9 :: 241 : 16

- Ans
- 1. 70
 - 2. 81
 - 3. 77
 - 4. 73

Question ID : 26433052019
Option 1 ID : 264330203380
Option 2 ID : 264330203381
Option 3 ID : 264330203379
Option 4 ID : 264330203378
Status : Answered
Chosen Option : 4

Q.10 K, L, M, N, X and Y are sitting around a circular table facing the centre. Only two people sit between M and X. L sits second to the right of X. Y sits to the immediate left of K. How many people sit between N and M when counted from the right of N?

- Ans
- 1. Two
 - 2. Three
 - 3. One
 - 4. None

Question ID : 264330104022
Option 1 ID : 264330408391
Option 2 ID : 264330408392
Option 3 ID : 264330408390
Option 4 ID : 264330408389
Status : Answered
Chosen Option : 2

Adda247

Q.11 Which figure should replace the question mark (?) if the following series were to be continued?

C O L 3 e	O C e L 3	e O C 3 L	O e L C 3	L O e 3 C	?
-----------	-----------	-----------	-----------	-----------	---

Ans

✓ 1. O L C e 3

✗ 2. e L O C 3

✗ 3. C L O e 3

✗ 4. C 3 O e L

Question ID : 264330103882

Option 1 ID : 264330407830

Option 2 ID : 264330407832

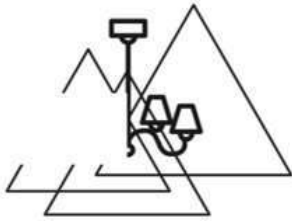
Option 3 ID : 264330407829

Option 4 ID : 264330407831

Status : Answered

Chosen Option : 3

Q.12 Which of the following option figures will complete the pattern in the figure given below?



Ans



Question ID : 26433080638

Option 1 ID : 264330316485

Option 2 ID : 264330316486

Option 3 ID : 264330316487

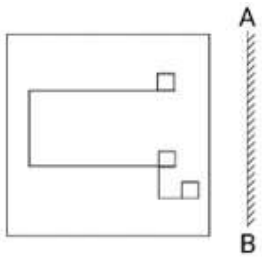
Option 4 ID : 264330316488

Status : Answered

Chosen Option : 4

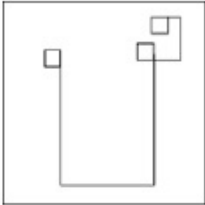
Adda247

Q.13 Select the correct mirror image of the given figure when the mirror is placed at 'AB' as shown.

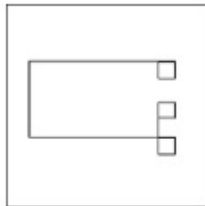


Ans

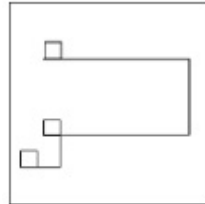
1.



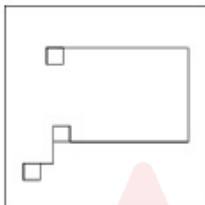
2.



3.



4.



Question ID : 264330114262

Option 1 ID : 264330449135

Option 2 ID : 264330449133

Option 3 ID : 264330449136

Option 4 ID : 264330449134

Status : Answered

Chosen Option : 3

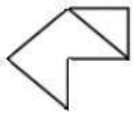
Q.14 Select the correct mirror image of the given figure when the mirror is placed at MN as shown below.



- Ans
- ✓ 1. Ʒ 5 A o K
 - ✗ 2. z 5 A o K
 - ✗ 3. Ʒ 5 V o K
 - ✗ 4. S Z A O K

Question ID : 26433016661
 Option 1 ID : 264330653684
 Option 2 ID : 264330653686
 Option 3 ID : 264330653683
 Option 4 ID : 264330653685
 Status : Answered
 Chosen Option : 1

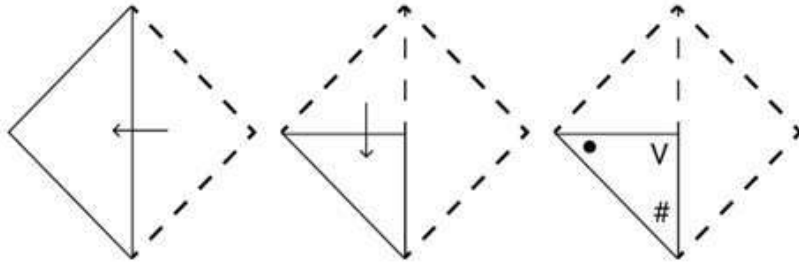
Q.15 Select the option in which the given figure is embedded (rotation is NOT allowed).



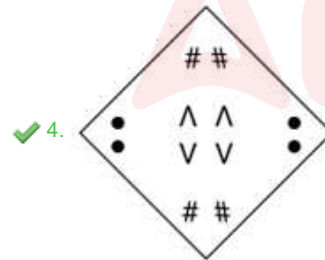
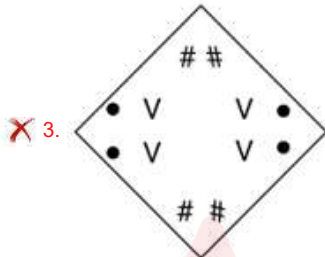
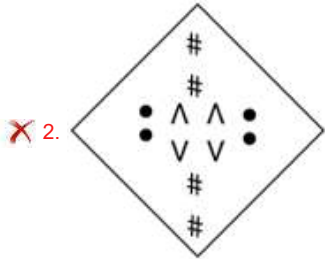
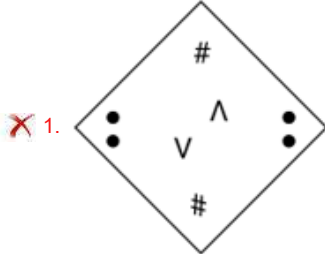
- Ans
- ✓ 1.
 - ✗ 2.
 - ✗ 3.
 - ✗ 4.

Question ID : 264330101165
 Option 1 ID : 264330397208
 Option 2 ID : 264330397207
 Option 3 ID : 264330397206
 Option 4 ID : 264330397205
 Status : Answered
 Chosen Option : 1

Q.16 A square sheet of paper is folded along the dotted line successively along the directions shown and is then punched in the last. How would the paper look when unfolded?



Ans



Question ID : 264330172433

Option 1 ID : 264330676283

Option 2 ID : 264330676285

Option 3 ID : 264330676284

Option 4 ID : 264330676286

Status : Answered

Chosen Option : 4

Q.17 Which of the following option figures will complete the pattern in the figure given below?



Ans

1.



2.



3.



4.



Question ID : 26433080599

Option 1 ID : 264330316331

Option 2 ID : 264330316332

Option 3 ID : 264330316330

Option 4 ID : 264330316329

Status : Answered

Chosen Option : 3

Q.18 Which of the following terms will replace the question mark (?) in the given series?
NHC, PKG, ?, TQO, VTS

Ans 1. RNK

2. SNK

3. SNL

4. RML

Question ID : 264330102182

Option 1 ID : 264330401193

Option 2 ID : 264330401194

Option 3 ID : 264330401196

Option 4 ID : 264330401195

Status : Answered

Chosen Option : 1

Q.19 Which figure should replace the question mark (?) if the series were to be continued?

3	O		D	3		9	S		L	9		
9	L		S	9		3	D		O	3		?
S	D	△	L	△	O	O	L	△	D	△	S	

Ans

1.

9	3	
L	O	
S	D	△
2.

L	D	
9	S	
O	3	△
3.

3	O	
9	L	
S	D	△
4.

O	L	
3	9	
△	S	D

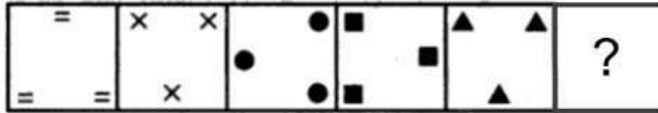
Question ID : 264330130821
 Option 1 ID : 264330512395
 Option 2 ID : 264330512397
 Option 3 ID : 264330512396
 Option 4 ID : 264330512398
 Status : Answered
 Chosen Option : 3

Q.20 In a code language, if MANGO is coded as 50 and BANANA is coded as 33, then how will COCONUT be coded?

1. 97
 2. 87
 3. 80
 4. 91

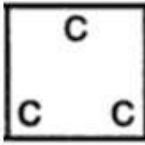
Question ID : 26433089487
 Option 1 ID : 264330351452
 Option 2 ID : 264330351450
 Option 3 ID : 264330351449
 Option 4 ID : 264330351451
 Status : Answered
 Chosen Option : 4

Q.21 Select the figure from among the given options that can replace the question mark (?) in the following series.




Ans

✓ 1.



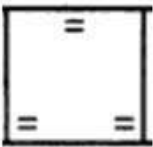
✗ 2.



✗ 3.



✗ 4.

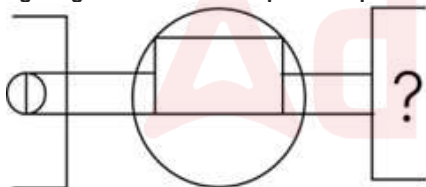


Question ID : 26433080525
 Option 1 ID : 264330316036
 Option 2 ID : 264330316033
 Option 3 ID : 264330316035
 Option 4 ID : 264330316034

Status : Answered

Chosen Option : 3

Q.22 Select the figure from the given options that will replace the question mark (?) in the figure given below to complete the pattern so that the final image is symmetrical.



Ans

✓ 1.



✗ 2.



✗ 3.



✗ 4.

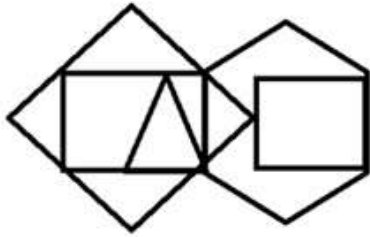


Question ID : 264330114735
 Option 1 ID : 264330451025
 Option 2 ID : 264330451026
 Option 3 ID : 264330451028
 Option 4 ID : 264330451027

Status : Answered

Chosen Option : 1

Q.23 How many triangles are there in the given figure?



- Ans
- 1. 4
 - 2. 3
 - 3. 6
 - 4. 5

Question ID : 26433068736
Option 1 ID : 264330269458
Option 2 ID : 264330269459
Option 3 ID : 264330269456
Option 4 ID : 264330269457

Status : Answered

Chosen Option : 3

Q.24 Select the correct combination of mathematical signs to sequentially replace the * signs and to balance the given equation.

$$26 * 52 * 38 * 57 * 23 = 53$$

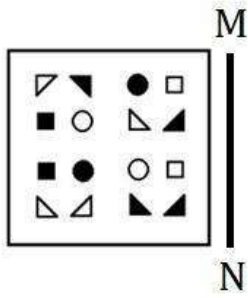
- Ans
- 1. +, x, -, +
 - 2. ÷, x, +, -
 - 3. x, ÷, +, -
 - 4. -, x, ÷, -

Question ID : 26433092506
Option 1 ID : 264330363314
Option 2 ID : 264330363313
Option 3 ID : 264330363315
Option 4 ID : 264330363316

Status : Answered


Chosen Option : 2

Q.25 Select the correct mirror image of the given figure when the mirror is placed at 'MN' as shown below.




Ans

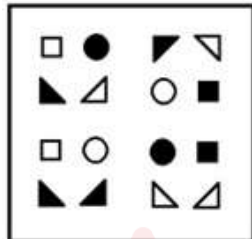
✗ 1.



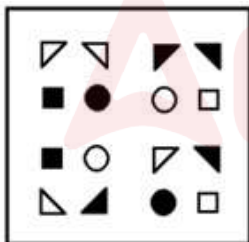
✗ 2.



✓ 3.



✗ 4.



Question ID : 264330172415

Option 1 ID : 264330676214

Option 2 ID : 264330676213

Option 3 ID : 264330676211

Option 4 ID : 264330676212

Status : Answered

Chosen Option : 3

Q.1 The average weight of A, B and C is 65 kg. The average weight of A and B is 62 kg and that of B and C is 57 kg. The weight of B is:

- Ans
- 1. 56 kg
 - 2. 43 kg
 - 3. 40 kg
 - 4. 53 kg

Question ID : 264330168978

Option 1 ID : 264330662717

Option 2 ID : 264330662716

Option 3 ID : 264330662715

Option 4 ID : 264330662718

Status : Answered

Chosen Option : 4

Q.2 A train increases its usual speed by 16% and reaches its destination 30 minutes early. What is the time taken (in hours) normally by the train in the journey?

- Ans
- 1. $2\frac{3}{8}$
 - 2. $6\frac{5}{8}$
 - 3. $3\frac{5}{8}$
 - 4. $1\frac{5}{8}$

Question ID : 264330119349

Option 1 ID : 264330467683

Option 2 ID : 264330467685

Option 3 ID : 264330467684

Option 4 ID : 264330467686

Status : Answered

Chosen Option : 3

Q.3 A person gives 25% discount and still gains 20%. What percentage above the M.P. is the C.P.?

- Ans
- 1. 25%
 - 2. 60%
 - 3. 18%
 - 4. 45%

Question ID : 264330183846

Option 1 ID : 264330721060

Option 2 ID : 264330721061

Option 3 ID : 264330721062

Option 4 ID : 264330721063

Status : Answered

Chosen Option : 2

Q.4 The surface area of a sphere of radius 4 cm is eight times the area of the curved surface area of a cone whose radius 2 cm. Find the volume of the cone.

- Ans
- 1. $\frac{2\pi}{\sqrt{3}} \text{ cm}^3$
 - 2. $\frac{4\pi}{\sqrt{3}} \text{ cm}^3$
 - 3. $\frac{8\pi}{\sqrt{3}} \text{ cm}^3$
 - 4. $\frac{6\pi}{\sqrt{3}} \text{ cm}^3$

Question ID : 264330111497
Option 1 ID : 264330438073
Option 2 ID : 264330438074
Option 3 ID : 264330438076
Option 4 ID : 264330438075
Status : Answered
Chosen Option : 3

Q.5 The number of prime numbers which are greater than 50 and less than 100 is:

- Ans
- 1. 9
 - 2. 10
 - 3. 11
 - 4. 13

Question ID : 264330104478
Option 1 ID : 264330410216
Option 2 ID : 264330410214
Option 3 ID : 264330410213
Option 4 ID : 264330410215
Status : Answered
Chosen Option : 2

Q.6 What is sum of the product of the 1st& 5th prime numbers and the 3rd& 9th prime numbers?

- Ans
- 1. 212
 - 2. 101
 - 3. 118
 - 4. 137

Question ID : 264330104346
Option 1 ID : 264330409688
Option 2 ID : 264330409685
Option 3 ID : 264330409686
Option 4 ID : 264330409687
Status : Answered
Chosen Option : 4

Q.7 What is the difference between the compound interests on ₹8,000 for 1 year at 6% per annum compounded yearly and half-yearly?

- Ans
- 1. ₹7.2
 - 2. ₹7.9
 - 3. ₹6.2
 - 4. ₹5.5

Question ID : 264330104362
Option 1 ID : 264330409750
Option 2 ID : 264330409752
Option 3 ID : 264330409749
Option 4 ID : 264330409751
Status : Answered
Chosen Option : 1

Q.8 In a village, there is a pond that has the radius 14 m. There is a fountain of diameter 14 m in the centre of the pond. Calculate the area of the pond excluding the fountain. (Use $\pi = \frac{22}{7}$)

- Ans
- 1. 462 m²
 - 2. 452 m²
 - 3. 482 m²
 - 4. 412 m²

Question ID : 26433091571
Option 1 ID : 264330359651
Option 2 ID : 264330359650
Option 3 ID : 264330359652
Option 4 ID : 264330359649
Status : Answered
Chosen Option : 1

Q.9 A city's population is 1,00,000. Next year it is expected to increase by 12%, and the year after that it is expected to decrease by 10%. Finally, the new population would be:

- Ans
- 1. 1,01,600
 - 2. 1,05,600
 - 3. 1,00,800
 - 4. 1,08,400

Question ID : 264330104390
Option 1 ID : 264330409863
Option 2 ID : 264330409862
Option 3 ID : 264330409864
Option 4 ID : 264330409861
Status : Answered
Chosen Option : 3

Q.10 400 men have provisions for 23 weeks. They are joined by 60 men. How long will the provisions last?

- Ans
- 1. 24 weeks
 - 2. 16 weeks
 - 3. 20 weeks
 - 4. 26 weeks

Question ID : 264330182571
Option 1 ID : 264330716077
Option 2 ID : 264330716075
Option 3 ID : 264330716076
Option 4 ID : 264330716078
Status : Answered
Chosen Option : 3

Q.11 Two sums of money are proportional to 5 : 9. If the first sum is 55, then the second sum is:

- Ans
- 1. 99
 - 2. 77
 - 3. 88
 - 4. 85

Question ID : 264330130935
Option 1 ID : 264330512852
Option 2 ID : 264330512853
Option 3 ID : 264330512851
Option 4 ID : 264330512854
Status : Answered
Chosen Option : 1

Q.12 A vendor bought buttons at 22 for a rupee. How many must he sell for a rupee to gain 10%?

- Ans
- 1. 20
 - 2. 16
 - 3. 19
 - 4. 18

Question ID : 264330126513
Option 1 ID : 264330495724
Option 2 ID : 264330495727
Option 3 ID : 264330495725
Option 4 ID : 264330495726
Status : Answered
Chosen Option : 1

Q.13 What is the least common multiple of 44, 108, 135, 162 and 198?

- Ans
- 1. 728
 - 2. 1778
 - 3. 820
 - 4. 17820

Question ID : 264330104334
Option 1 ID : 264330409637
Option 2 ID : 264330409639
Option 3 ID : 264330409638
Option 4 ID : 264330409640
Status : Answered
Chosen Option : 4

Q.14 At what rate per annum on simple interest will a sum of money double itself in 8 years?

- Ans
- 1. 5.6%
 - 2. 2.5%
 - 3. 12.5%
 - 4. 6.25%

Question ID : 264330182525
Option 1 ID : 264330715893
Option 2 ID : 264330715894
Option 3 ID : 264330715892
Option 4 ID : 264330715891
Status : Answered
Chosen Option : 3

Q.15 A company is earning an income from which expenditure (other than tax) is deducted to get the amount of profit earned. The company has to pay tax of 22% on the profit earned. If net profit after paying taxes is ₹2,340, which is 18% of expenditure (other than taxes), what was the income (in ₹) of the company?

- Ans
- 1. 16,667
 - 2. 19,000
 - 3. 13,000
 - 4. 16,000

Question ID : 264330129996
Option 1 ID : 264330509218
Option 2 ID : 264330509216
Option 3 ID : 264330509215
Option 4 ID : 264330509217
Status : Answered
Chosen Option : 1

Section : Computer Proficiency

Q.1 What is the shortcut command in MS-Word 365 for cutting the text?

- Ans
- 1. Ctrl + Z
 - 2. Ctrl + V
 - 3. Ctrl + C
 - 4. Ctrl + X

Question ID : 264330171411
Option 1 ID : 264330672262
Option 2 ID : 264330672261
Option 3 ID : 264330672260
Option 4 ID : 264330672259
Status : Answered
Chosen Option : 4

Q.2 Which of the following is the advantage of using an Electronic mail?

- Ans** 1. It is convenient and fast communication with individuals or groups globally.
2. An overwhelming number of emails can lead to information overload.
3. Vulnerability to spam and phishing threats.
4. It can lead to decreased face-to-face communication and loss of personal touch.

Question ID : 264330179435
Option 1 ID : 264330703746
Option 2 ID : 264330703744
Option 3 ID : 264330703743
Option 4 ID : 264330703745
Status : Answered
Chosen Option : 1

Q.3 What is the purpose of the 'Undo' command in Microsoft Excel?

- Ans** 1. It saves the current workbook.
2. It inserts a new worksheet.
3. It copies selected cells.
4. It reverses the last action performed.

Question ID : 264330180698
Option 1 ID : 264330708759
Option 2 ID : 264330708762
Option 3 ID : 264330708760
Option 4 ID : 264330708761
Status : Answered
Chosen Option : 4

Q.4 How do we move a piece of text from one place to another in Microsoft Word 365?

- Ans** 1. Cut and Paste
2. Cut and Insert
3. Copy and Insert
4. Copy and Paste

Question ID : 264330182084
Option 1 ID : 264330714178
Option 2 ID : 264330714177
Option 3 ID : 264330714176
Option 4 ID : 264330714175
Status : Answered
Chosen Option : 1

Q.5 Which of the following is NOT a type of communication on the internet?

- Ans** 1. Chat
2. Video conferencing
3. Telepathy
4. Email

Question ID : 264330178554
Option 1 ID : 264330700244
Option 2 ID : 264330700245
Option 3 ID : 264330700246
Option 4 ID : 264330700243
Status : Answered
Chosen Option : 3

Q.6 In MS Excel 365, which of the following options in MS Excel will arrange data in descending order based on the selected column(s)?

- Ans**
- 1. Click 'Sort A to Z'
 - 2. Click the filter button
 - 3. Click the 'Sort Z to A' button
 - 4. Click on 'Find & Select'

Question ID : 264330180821
Option 1 ID : 264330709247
Option 2 ID : 264330709249
Option 3 ID : 264330709248
Option 4 ID : 264330709250
Status : Answered
Chosen Option : 3

Q.7 In MS-Word 365, which feature allows you to create a new document quickly without having to start from scratch, using a predefined layout and formatting?

- Ans**
- 1. Print Layout View
 - 2. Document Template
 - 3. AutoSave
 - 4. Spelling and Grammar Check

Question ID : 264330173351
Option 1 ID : 264330679885
Option 2 ID : 264330679884
Option 3 ID : 264330679883
Option 4 ID : 264330679886
Status : Answered
Chosen Option : 2

Q.8 What is the purpose of the 'Drag-and-Drop' method in Microsoft Word 365?

- Ans**
- 1. To format text
 - 2. To copy or move text by dragging it to a new location
 - 3. To print text
 - 4. To select text

Question ID : 264330180706
Option 1 ID : 264330708792
Option 2 ID : 264330708793
Option 3 ID : 264330708794
Option 4 ID : 264330708791
Status : Answered
Chosen Option : 2

Q.9 Which of the following Tabs is used to locate Bullets and Numbering icons of MS-Word 2010?

- Ans**
- 1. View Tab
 - 2. Home Tab
 - 3. Design Tab
 - 4. Insert Tab

Question ID : 264330178265
Option 1 ID : 264330699117
Option 2 ID : 264330699116
Option 3 ID : 264330699118
Option 4 ID : 264330699115
Status : Answered
Chosen Option : 4

Q.10 In MS Excel 365, to open an existing spreadsheet, which of the following shortcut keys is used?

- Ans**
- 1. Ctrl + N
 - 2. Ctrl + E
 - 3. Ctrl + O
 - 4. Ctrl + I

Question ID : 264330175949

Option 1 ID : 264330690093

Option 2 ID : 264330690094

Option 3 ID : 264330690091

Option 4 ID : 264330690092

Status : Answered

Chosen Option : 3



Constable Executive Male and Female in Delhi Police Examination 2023

Roll Number	
Candidate Name	
Venue Name	iON Digital Zone iDZ Bopal
Exam Date	01/12/2023
Exam Time	3:00 PM - 4:30 PM
Subject	Constable Executive Male and Female in Delhi Police Examination 2023

Section : General Knowledge

Q.1 Guru Pankaj Charan Das and Guru Debaprasad Das are associated with which of the following dance forms?

- Ans
- 1. Manipuri
 - 2. Odissi
 - 3. Kathak
 - 4. Kathakali

Question ID : 264330110407
Option 1 ID : 264330433905
Option 2 ID : 264330433908
Option 3 ID : 264330433907
Option 4 ID : 264330433906
Status : Answered
Chosen Option : 2

Q.2 Which of the following policies is generally revealed by the annual financial statement of the Government of India?

- Ans
- 1. Monetary policy
 - 2. Industrial policy
 - 3. Fiscal policy
 - 4. Population policy

Question ID : 264330120869
Option 1 ID : 264330473693
Option 2 ID : 264330473692
Option 3 ID : 264330473691
Option 4 ID : 264330473694
Status : Answered
Chosen Option : 3

Q.3 In medieval architecture, Khanqahs are associated with _____.

- Ans
- 1. sufi saints
 - 2. nawabs
 - 3. traders
 - 4. queens

Question ID : 264330109647
Option 1 ID : 264330430866
Option 2 ID : 264330430865
Option 3 ID : 264330430867
Option 4 ID : 264330430868
Status : Answered
Chosen Option : 3

Q.4 Which of the following committees/commissions was set up in 1976 for recommending for fundamental duties by the Indira Gandhi Government?

- Ans
- 1. Thakaar Commission
 - 2. Sarkaria Commission
 - 3. Swaran Singh Committee
 - 4. Shah Commission

Question ID : 264330110125
Option 1 ID : 264330432779
Option 2 ID : 264330432778
Option 3 ID : 264330432780
Option 4 ID : 264330432777
Status : Answered
Chosen Option : 3

Q.5 The Narora Atomic Power Station is situated on the banks of the Ganga in _____ state.

- Ans
- 1. Bihar
 - 2. West Bengal
 - 3. Uttarakhand
 - 4. Uttar Pradesh

Question ID : 264330120315
Option 1 ID : 264330471511
Option 2 ID : 264330471514
Option 3 ID : 264330471512
Option 4 ID : 264330471513
Status : Answered
Chosen Option : 2

Q.6 The rate at which consumers convert the chemical energy in their food into their biomass is called:

- Ans
- 1. primary productivity
 - 2. secondary productivity
 - 3. gross primary productivity
 - 4. net tertiary productivity

Question ID : 264330111893
Option 1 ID : 264330439658
Option 2 ID : 264330439657
Option 3 ID : 264330439659
Option 4 ID : 264330439660
Status : Not Answered
Chosen Option : --

Q.7 Which of the following novels is NOT written by Chetan Bhagat?

- Ans
- 1. The Girl in Room 105
 - 2. One Arranged Murder
 - 3. Who Will Cry When You Die?
 - 4. 400 Days

Question ID : 264330112869
Option 1 ID : 264330443563
Option 2 ID : 264330443564
Option 3 ID : 264330443562
Option 4 ID : 264330443561
Status : Answered
Chosen Option : 3

Q.8 Which of the following festivals is NOT widely celebrated by the tribal people of Jharkhand?

- Ans
- 1. Sarhul
 - 2. Jawa
 - 3. Hareli
 - 4. Karma

Question ID : 264330134248
Option 1 ID : 264330525987
Option 2 ID : 264330525990
Option 3 ID : 264330525988
Option 4 ID : 264330525989
Status : Answered
Chosen Option : 2

Q.9 Who was the autobiographer of 'Ace against Odds'?

- Ans
- 1. Mithali Raj
 - 2. PV Sindhu
 - 3. Sania Nehwal
 - 4. Sania Mirza

Question ID : 26433064215
Option 1 ID : 264330251455
Option 2 ID : 264330251454
Option 3 ID : 264330251453
Option 4 ID : 264330251452
Status : Answered
Chosen Option : 4

Q.10 The Treaty of Rajpurghat was concluded by the East India Company with which Maratha power?

- Ans
- 1. Gaekwads
 - 2. Sindhia
 - 3. Bhonsle
 - 4. Holkar

Question ID : 264330119712
Option 1 ID : 264330469126
Option 2 ID : 264330469123
Option 3 ID : 264330469125
Option 4 ID : 264330469124
Status : Answered
Chosen Option : 4

Q.11 According to the Census of India 2011, which state of India has the highest number of Scheduled Caste population?

- Ans
- 1. Maharashtra
 - 2. Madhya Pradesh
 - 3. Bihar
 - 4. Uttar Pradesh

Question ID : 264330167035
Option 1 ID : 264330655146
Option 2 ID : 264330655143
Option 3 ID : 264330655144
Option 4 ID : 264330655145
Status : Answered
Chosen Option : 4

Q.12 Which place in the Garo hills of Meghalaya may receive an amount of rainfall in a day equal to 10 years of rainfall in Jaisalmer of Rajasthan?

- Ans
- 1. Baghmara
 - 2. Aminda
 - 3. Tura
 - 4. Cherrapunji

Question ID : 264330134894
Option 1 ID : 264330528511
Option 2 ID : 264330528514
Option 3 ID : 264330528512
Option 4 ID : 264330528513
Status : Answered
Chosen Option : 4

Q.13 _____ means the transfer of ownership, management and control of public sector enterprises to the private sector.

- Ans
- 1. Digitalisation
 - 2. Globalisation
 - 3. Liberalisation
 - 4. Privatisation

Question ID : 264330110026
Option 1 ID : 264330432384
Option 2 ID : 264330432383
Option 3 ID : 264330432381
Option 4 ID : 264330432382
Status : Answered
Chosen Option : 4

Q.14 The beautiful square-shaped Mughal architecture, Kanch Mahal is situated in which of the following cities of India?

- Ans
- 1. Agra
 - 2. Ahmedabad
 - 3. Aurangabad
 - 4. Hyderabad

Question ID : 264330111849
Option 1 ID : 264330439484
Option 2 ID : 264330439483
Option 3 ID : 264330439482
Option 4 ID : 264330439481
Status : Not Answered
Chosen Option : --

Q.15 Which of the following is an external agency with which NABARD has collaborated to promote micro-finance in 2005-06?

- Ans
- 1. International Monetary Fund
 - 2. International Bank for Reconstruction and Development
 - 3. Swiss Agency for Development Cooperation
 - 4. New Development Bank, BRICS

Question ID : 264330117579
Option 1 ID : 264330462343
Option 2 ID : 264330462342
Option 3 ID : 264330462341
Option 4 ID : 264330462344
Status : Answered
Chosen Option : 1

Q.16 Who among the following wrote the famous song, 'Amar Sonar Bangla', which became the national anthem of Bangladesh after its independence in 1971?

- Ans
- 1. Bankim Chandra Chatterjee
 - 2. Ramprasad Sen
 - 3. Rabindranath Tagore
 - 4. Madhusudan Dutt

Question ID : 264330113588
Option 1 ID : 264330446439
Option 2 ID : 264330446437
Option 3 ID : 264330446438
Option 4 ID : 264330446440
Status : Answered
Chosen Option : 1

Q.17 Who was the President of the Board of Trade when the Cabinet Mission visited India?

- Ans
- 1. AV Alexander
 - 2. Lord Wavell
 - 3. Stafford Cripps
 - 4. Pethick Lawrence

Question ID : 264330119310
Option 1 ID : 264330467527
Option 2 ID : 264330467530
Option 3 ID : 264330467529
Option 4 ID : 264330467528
Status : Answered
Chosen Option : 1

Q.18 Kalhan, a 12th century author, had described the history of which of the following regions in his book titled 'Rajatarangini'?

- Ans
- 1. Orissa
 - 2. Gujarat
 - 3. Rajasthan
 - 4. Kashmir

Question ID : 264330176885
Option 1 ID : 264330693742
Option 2 ID : 264330693740
Option 3 ID : 264330693739
Option 4 ID : 264330693741
Status : Answered
Chosen Option : 4

Q.19 Lakshmbai National Institute of Physical Education was founded in _____.

- Ans 1. 1965
 2. 1957
 3. 1960
 4. 1956

Question ID : 264330110376
Option 1 ID : 264330433784
Option 2 ID : 264330433783
Option 3 ID : 264330433782
Option 4 ID : 264330433781
Status : Not Answered
Chosen Option : --

Q.20 A wood boring shipworm is:

- Ans 1. umax
 2. teredo
 3. patella
 4. chiton

Question ID : 26433064422
Option 1 ID : 264330252282
Option 2 ID : 264330252280
Option 3 ID : 264330252283
Option 4 ID : 264330252281
Status : Answered
Chosen Option : 2

Q.21 A kangaroo ran 150 m in the first 40 seconds and then, it ran 100 m in the next 10 seconds. Still, its displacement was only 50 m. The average speed of the kangaroo is:

- Ans 1. 1 m/s
 2. 10 m/s
 3. 3.75 m/s
 4. 5 m/s

Question ID : 264330177009
Option 1 ID : 264330694231
Option 2 ID : 264330694233
Option 3 ID : 264330694234
Option 4 ID : 264330694232
Status : Not Answered
Chosen Option : --

Q.22 Chirag Chandrashekhar Shetty is related to _____.

- Ans 1. Cricket
 2. Badminton
 3. Tennis
 4. Chess

Question ID : 264330132523
Option 1 ID : 264330519187
Option 2 ID : 264330519189
Option 3 ID : 264330519190
Option 4 ID : 264330519188
Status : Answered
Chosen Option : 2

Q.23 Palghat Raghu was a famous _____ player.

- Ans 1. sarangi
 2. mridangam
 3. flute
 4. tabla

Question ID : 26433011956
Option 1 ID : 264330439909
Option 2 ID : 264330439911
Option 3 ID : 264330439910
Option 4 ID : 264330439912
Status : Answered
Chosen Option : 3

Q.24 According the Census 2011 of India, which state of India has the second highest literacy rate?

- Ans 1. Meghalaya
 2. Tamil Nadu
 3. Karnataka
 4. Mizoram

Question ID : 264330138076
Option 1 ID : 264330540914
Option 2 ID : 264330540911
Option 3 ID : 264330540913
Option 4 ID : 264330540912
Status : Answered
Chosen Option : 2

Q.25 How many members of Rajya Sabha are nominated by the President?

- Ans 1. 25
 2. 12
 3. 19
 4. 23

Question ID : 26433086849
Option 1 ID : 264330341039
Option 2 ID : 264330341037
Option 3 ID : 264330341038
Option 4 ID : 264330341040
Status : Answered
Chosen Option : 2

Q.26 The Election Commission of India became a three-member body in 1989, again it was made into a single member body in the year _____ .

- Ans 1. 1990
 2. 1993
 3. 1992
 4. 1991

Question ID : 264330137418
Option 1 ID : 264330538299
Option 2 ID : 264330538302
Option 3 ID : 264330538301
Option 4 ID : 264330538300
Status : Answered
Chosen Option : 3

Q.27 In cricket, a full-pitched ball aimed at the batsman's toes or on the crease line is called

- Ans 1. Yorker
 2. Zooter
 3. waft
 4. googly

Question ID : 264330113761
Option 1 ID : 264330447132
Option 2 ID : 264330447131
Option 3 ID : 264330447129
Option 4 ID : 264330447130
Status : Not Answered
Chosen Option : --

Q.28 Which of the following animals had the most prestigious place in society during the later Vedic period?

- Ans 1. Horse
 2. Elephant
 3. Bull
 4. Cow

Question ID : 264330120236
Option 1 ID : 264330471201
Option 2 ID : 264330471200
Option 3 ID : 264330471199
Option 4 ID : 264330471202
Status : Answered
Chosen Option : 4

Q.29 Which instrument is used to measure blood pressure of the body?

- Ans 1. Sphygmomanometer
 2. Thermometer
 3. Stethoscope
 4. Heart Rate Monitor

Question ID : 264330176143
Option 1 ID : 264330690868
Option 2 ID : 264330690870
Option 3 ID : 264330690869
Option 4 ID : 264330690867
Status : Answered
Chosen Option : 1

Q.30 Who among the following was the founder of the slave dynasty who was the army commander of Muhammad Ghori earlier?

- Ans 1. Qutbuddin Aibak
 2. Iltutmish
 3. Nasiruddin Mahmud Shah
 4. Muizuddin Bahram

Question ID : 264330183120
Option 1 ID : 264330718215
Option 2 ID : 264330718214
Option 3 ID : 264330718212
Option 4 ID : 264330718213
Status : Answered
Chosen Option : 1

Q.31 The strong, gusty, hot, dry winds blowing during the day over the north and northwestern India are called:

- Ans
- 1. Loo
 - 2. Foehn
 - 3. Khamsin
 - 4. Sirocco

Question ID : 264330177096
Option 1 ID : 264330694581
Option 2 ID : 264330694579
Option 3 ID : 264330694582
Option 4 ID : 264330694580
Status : Answered
Chosen Option : 1

Q.32 Which of the following states was NOT amongst the top three states with highest total percentage of literacy rate, in the 2011 census?

- Ans
- 1. Kerala
 - 2. Goa
 - 3. Tripura
 - 4. Mizoram

Question ID : 264330120338
Option 1 ID : 264330471604
Option 2 ID : 264330471606
Option 3 ID : 264330471605
Option 4 ID : 264330471603
Status : Answered
Chosen Option : 2

Q.33 As of July 2023, the Vivek Express Train has longest route in India running between _____ and Kanyakumari.

- Ans
- 1. Silchar
 - 2. Guwahati
 - 3. Dispur
 - 4. Dibrugarh

Question ID : 264330180587
Option 1 ID : 264330708318
Option 2 ID : 264330708317
Option 3 ID : 264330708316
Option 4 ID : 264330708315
Status : Answered
Chosen Option : 2

Q.34 Sangeet Natak Akademi award winner, Tapan Kumar Pattanayak is a _____ dancer.

- Ans
- 1. Odissi
 - 2. Chhau
 - 3. Mohiniattam
 - 4. Manipuri

Question ID : 264330111965
Option 1 ID : 264330439946
Option 2 ID : 264330439947
Option 3 ID : 264330439948
Option 4 ID : 264330439945
Status : Answered
Chosen Option : 1

Q.35 Which of the following constitutions inspired for the inclusion of Fundamental Duties in Indian Constitution?

- Ans
- 1. Canadian
 - 2. Irish
 - 3. USSR
 - 4. USA

Question ID : 264330173483
Option 1 ID : 264330680413
Option 2 ID : 264330680414
Option 3 ID : 264330680412
Option 4 ID : 264330680411
Status : Answered
Chosen Option : 3

Q.36 Family planning was introduced in the _____ five-year plan.

- Ans
- 1. third
 - 2. second
 - 3. sixth
 - 4. first

Question ID : 264330118244
Option 1 ID : 264330464792
Option 2 ID : 264330464791
Option 3 ID : 264330464794
Option 4 ID : 264330464793
Status : Answered
Chosen Option : 1

Q.37 Which of the following rights fall under Article 21?

- Ans
- 1. Protection of language, culture of minorities
 - 2. Prohibition of discrimination on caste
 - 3. Protection of life and personal liberty
 - 4. Freedom to manage religious affairs

Question ID : 264330118535
Option 1 ID : 264330465541
Option 2 ID : 264330465544
Option 3 ID : 264330465542
Option 4 ID : 264330465543
Status : Answered
Chosen Option : 3

Q.38 In which year did the members of the Indian Constituent Assembly first meet to draft a constitution for the country?

- Ans 1. 1946
 2. 1948
 3. 1947
 4. 1949

Question ID : 264330133041
Option 1 ID : 264330521218
Option 2 ID : 264330521216
Option 3 ID : 264330521217
Option 4 ID : 264330521215
Status : Answered
Chosen Option : 1

Q.39 For which of the following folk music is Lalon Fakir famous?

- Ans 1. Baul
 2. Pandavani
 3. Alha
 4. Wanawan

Question ID : 264330111425
Option 1 ID : 264330437785
Option 2 ID : 264330437787
Option 3 ID : 264330437788
Option 4 ID : 264330437786
Status : Not Answered
Chosen Option : --

Q.40 Which of the following food is NOT iron rich?

- Ans 1. Spinach
 2. Red meat
 3. Lemon
 4. Peas

Question ID : 264330111907
Option 1 ID : 264330439713
Option 2 ID : 264330439714
Option 3 ID : 264330439716
Option 4 ID : 264330439715
Status : Answered
Chosen Option : 3

Q.41 In which state is Mukhyamantri Krishi Ashirwad Yojana launched?

- Ans 1. Jharkhand
 2. Odisha
 3. Bihar
 4. Kerala

Question ID : 264330108912
Option 1 ID : 264330427925
Option 2 ID : 264330427926
Option 3 ID : 264330427927
Option 4 ID : 264330427928
Status : Answered
Chosen Option : 4

Q.42 In the context of introducing the green revolution to Eastern India, a scheme called BGREI was launched. When was this scheme launched?

- Ans
- 1. 2005-06
 - 2. 2009-10
 - 3. 2010-11
 - 4. 2008-09

Question ID : 264330109400
Option 1 ID : 264330429877
Option 2 ID : 264330429879
Option 3 ID : 264330429880
Option 4 ID : 264330429878
Status : Answered
Chosen Option : 1

Q.43 What percentage of the total catchment area of the Krishna basin flows through Karnataka?

- Ans
- 1. 20%
 - 2. 62%
 - 3. 31%
 - 4. 44%

Question ID : 264330113529
Option 1 ID : 264330446201
Option 2 ID : 264330446202
Option 3 ID : 264330446203
Option 4 ID : 264330446204
Status : Answered
Chosen Option : 4

Q.44 The Members of Parliament Local Area Development (MPLAD) scheme is implemented by which Union Ministry?

- Ans
- 1. Ministry of Statistics and Programme Implementation
 - 2. Ministry of Parliament Affairs
 - 3. Ministry of Social Justice and empowerment
 - 4. Ministry of Home Affairs

Question ID : 264330110185
Option 1 ID : 264330433019
Option 2 ID : 264330433017
Option 3 ID : 264330433020
Option 4 ID : 264330433018
Status : Answered
Chosen Option : 2

Q.45 Who among the following recipients of Kalidas Samman is associated with Classical Dance?

- Ans 1. Jagdish Swaminathan
 2. Sonal Mansingh
 3. Manna Dey
 4. Vilayat Khan

Question ID : 264330111199
Option 1 ID : 264330436882
Option 2 ID : 264330436884
Option 3 ID : 264330436883
Option 4 ID : 264330436881
Status : Answered
Chosen Option : 2

Q.46 The archaeological site of Inamgaon is situated at the bank of river Ghod which is a tributary of _____.

- Ans 1. Bhima
 2. Mahanadi
 3. Periyar
 4. Ganga

Question ID : 264330120416
Option 1 ID : 264330471915
Option 2 ID : 264330471916
Option 3 ID : 264330471917
Option 4 ID : 264330471918
Status : Answered
Chosen Option : 1

Q.47 The Poona Sarvajanik Sabha, which was one of the strongest political organisations of 19th century India in Maharashtra, was launched in the year:

- Ans 1. 1865
 2. 1870
 3. 1872
 4. 1868

Question ID : 264330171703
Option 1 ID : 264330673415
Option 2 ID : 264330673417
Option 3 ID : 264330673418
Option 4 ID : 264330673416
Status : Not Answered
Chosen Option : --

Q.48 Which of the following can be considered a DEMERIT of the parliamentary form of government?

- Ans
- 1. Wide representation
 - 2. Unstable government
 - 3. Prevents despotism
 - 4. Responsible government

Question ID : 26433017769
Option 1 ID : 264330697183
Option 2 ID : 264330697184
Option 3 ID : 264330697186
Option 4 ID : 264330697185
Status : Answered
Chosen Option : 2

Q.49 Which of the following awards in the field of dance, art and music is given by the Government of Madhya Pradesh?

- Ans
- 1. Sanatan Sangeet Sankriti Samman
 - 2. Kalidas Samman
 - 3. Sangeet Natak Akademi Award
 - 4. Tagore Ratna

Question ID : 264330111198
Option 1 ID : 264330436877
Option 2 ID : 264330436879
Option 3 ID : 264330436878
Option 4 ID : 264330436880
Status : Not Answered
Chosen Option : --

Q.50 The Dehing Patkai festival is named after which of the following?

- Ans
- 1. River-Mountain
 - 2. Butterfly-Flower
 - 3. Forest-Animal
 - 4. Bird-Tree

Question ID : 264330110456
Option 1 ID : 264330434102
Option 2 ID : 264330434104
Option 3 ID : 264330434101
Option 4 ID : 264330434103
Status : Answered
Chosen Option : 1

Q.1 Select the set in which the numbers are related in the same way as are the numbers of the given sets.

(NOTE: Operations should be performed on the whole numbers, without breaking down the numbers into its constituent digits. E.g., 13 – Operations on 13 such as adding/ deleting/ multiplying etc. to 13 can be performed. Breaking down 13 into 1 and 3 and then performing mathematical operations on 1 and 3 is not allowed.

(291, 138, 353)

(178, 154, 256)

Ans 1. (410, 104, 428)

2. (331, 197, 452)

3. (125, 136, 191)

4. (206, 148, 280)

Question ID : 264330178750

Option 1 ID : 264330701030

Option 2 ID : 264330701027

Option 3 ID : 264330701029

Option 4 ID : 264330701028

Status : Not Answered

Chosen Option : --

Q.2 In a code language, if BOWLER is coded as 25-12-4-15-22-9 and BATSMAN is coded as 25-26-7-8-14-26-13, then how will UMPIRE be coded?

Ans 1. 7-15-12-19-10-23

2. 5-13-10-17-8-21

3. 6-15-11-19-9-23

4. 6-14-11-18-9-22

Question ID : 26433089485

Option 1 ID : 264330351442

Option 2 ID : 264330351443

Option 3 ID : 264330351444

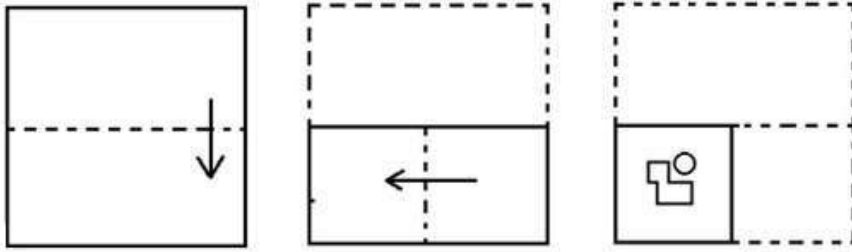
Option 4 ID : 264330351441

Status : Answered

Chosen Option : 4

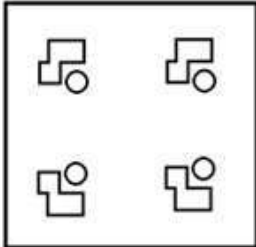
Adda247

Q.3 The sequence of folding a piece of paper and the manner in which the folded paper has been cut is shown below. Choose a figure which would most closely resemble the unfolded form of the paper.

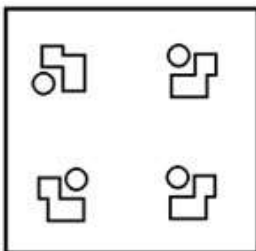


Ans

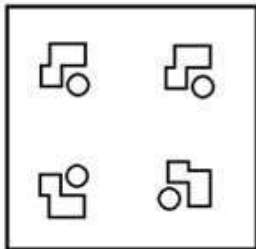
✗ 1.



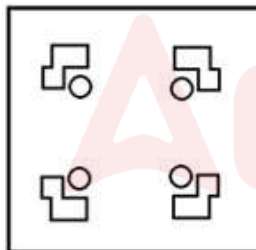
✗ 2.



✗ 3.



✓ 4.



Question ID : 264330112312

Option 1 ID : 264330441334

Option 2 ID : 264330441333

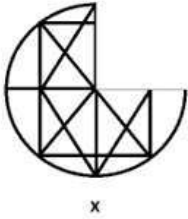
Option 3 ID : 264330441336

Option 4 ID : 264330441335

Status : Answered

Chosen Option : 4

Q.4 Select a figure from amongst the four given options which, when placed in the blank space of figure (X), would complete the pattern.



Ans

- 1.
- 2.
- 3.
- 4.

Question ID : 264330102211

Option 1 ID : 264330401309

Option 2 ID : 264330401311

Option 3 ID : 264330401312

Option 4 ID : 264330401310

Status : Answered

Chosen Option : 2

Q.5 Read the given statements and conclusions carefully. Assuming that the information given in the statements is true, even if it appears to be at variance with commonly known facts, decide which of the given conclusions logically follow(s) from the statements.

Statements:

All keys are locks.

All locks are handles.

Conclusions:

I. Some locks are keys.

II. All keys are handles.

- Ans**
- 1. Only conclusion II follows
 - 2. Both conclusions I and II follow
 - 3. Only conclusion I follows
 - 4. Neither conclusion I nor II follows

Question ID : 26433069507

Option 1 ID : 264330272541

Option 2 ID : 264330272542

Option 3 ID : 264330272540

Option 4 ID : 264330272543

Status : Answered

Chosen Option : 2

Q.6 Select the option that is related to the third word in the same way as the second word is related to the first word. (The words must be considered as meaningful English words and must NOT be related to each other based on the number of letters/number of consonants/vowels in the word)

Rocks : Mountain :: Grass : ?

Ans 1. Garden

2. Sweets

3. Pen

4. Shop

Question ID : 26433069142

Option 1 ID : 264330271080

Option 2 ID : 264330271082

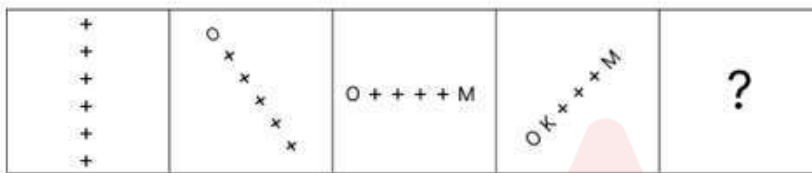
Option 3 ID : 264330271081

Option 4 ID : 264330271083

Status : Answered

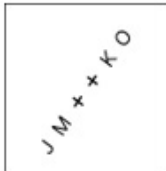
Chosen Option : 1

Q.7 Select the figure that will come next in the following figure series.



Ans

1.



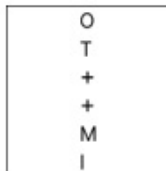
2.



3.



4.



Question ID : 264330112732

Option 1 ID : 264330443014

Option 2 ID : 264330443013

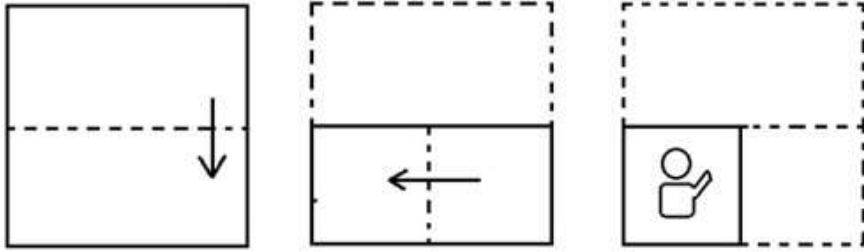
Option 3 ID : 264330443015

Option 4 ID : 264330443016

Status : Answered

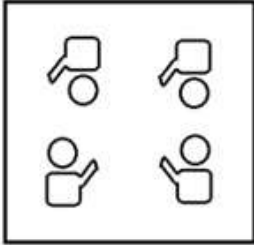
Chosen Option : 3

Q.8 The sequence of folding a piece of paper and the manner in which the folded paper has been cut is shown below. Choose a figure which would most closely resemble the unfolded form of the paper.

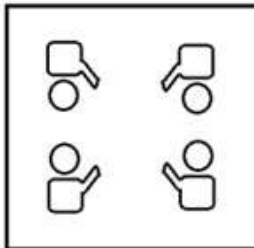


Ans

✗ 1.



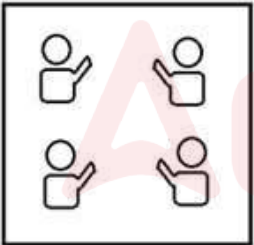
✓ 2.



✗ 3.



✗ 4.



Question ID : 264330112319

Option 1 ID : 264330441362

Option 2 ID : 264330441364

Option 3 ID : 264330441361

Option 4 ID : 264330441363

Status : Answered

Chosen Option : 2

Q.9 Select the correct mirror image of the given figure when the mirror is placed at PQ as shown below.

R B U K E A



- Ans
- 1. A K E U R B
 - 2. A K E U R B
 - 3. R B U K E A
 - 4. R B U K E A

Question ID : 26433080770
Option 1 ID : 264330317014
Option 2 ID : 264330317015
Option 3 ID : 264330317013
Option 4 ID : 264330317016
Status : Answered
Chosen Option : 1

Q.10 Six people, A, B, C, D, E and F, are sitting in a straight row facing north. Only two people sit to the left of D. Only two people sit between D and E. F sits to the immediate right of C. A sits to the immediate left of B. B is not a neighbour of D. Who sits at the extreme left end of the row?

- Ans
- 1. A
 - 2. F
 - 3. C
 - 4. B

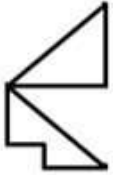
Question ID : 26433089501
Option 1 ID : 264330351505
Option 2 ID : 264330351507
Option 3 ID : 264330351508
Option 4 ID : 264330351506
Status : Answered
Chosen Option : 3

Q.11 Which of the following terms will replace the question mark (?) in the given series?
PDRY, QFQW, RHPU, ?, TLNQ

- Ans
- 1. JOSS
 - 2. SOJS
 - 3. SJOS
 - 4. JSOS

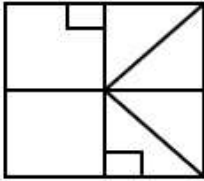
Question ID : 264330102168
Option 1 ID : 264330401139
Option 2 ID : 264330401138
Option 3 ID : 264330401137
Option 4 ID : 264330401140
Status : Answered
Chosen Option : 3

Q.12 The given figure is followed by four option figures. Select the option figure in which this figure is embedded (i.e., contains this figure in the same form; rotation is NOT allowed).

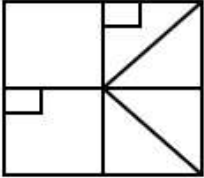


Ans

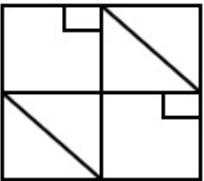
✓ 1.



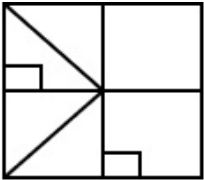
✗ 2.



✗ 3.



✗ 4.



Question ID : 264330121618

Option 1 ID : 264330476644

Option 2 ID : 264330476645

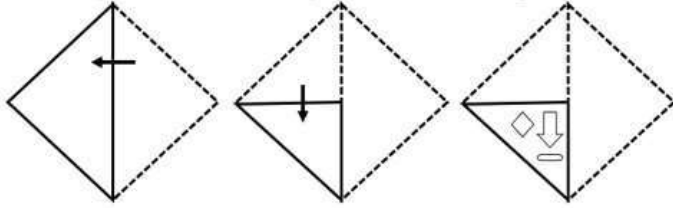
Option 3 ID : 264330476643

Option 4 ID : 264330476646

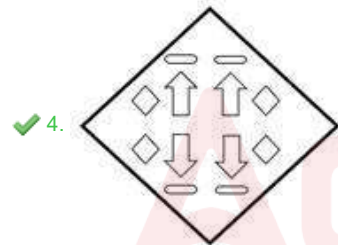
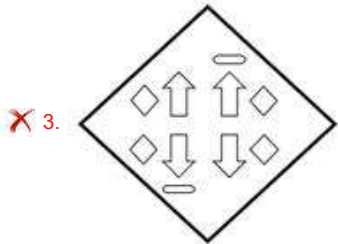
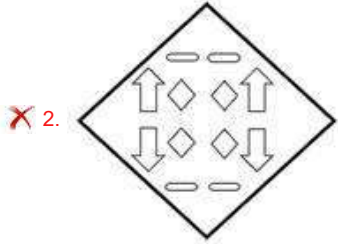
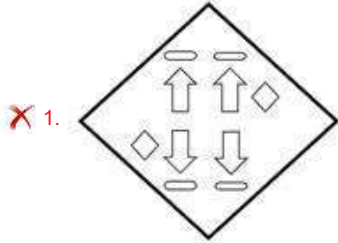
Status : Answered

Chosen Option : 1

Q.13 A paper is folded and cut as shown below. How will it appear when unfolded?

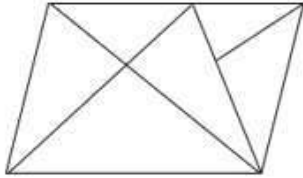


Ans



Question ID : 26433076507
Option 1 ID : 264330300092
Option 2 ID : 264330300093
Option 3 ID : 264330300095
Option 4 ID : 264330300094
Status : Answered
Chosen Option : 4

Q.14 How many triangles are there in the given figure?



Ans 1. 12

2. 9

3. 8

4. 10

Question ID : 26433080452

Option 1 ID : 264330315756

Option 2 ID : 264330315757

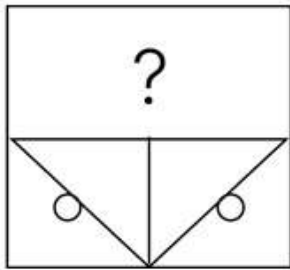
Option 3 ID : 264330315759

Option 4 ID : 264330315758

Status : Not Answered

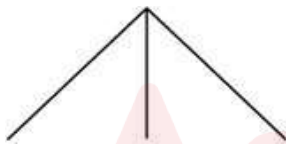
Chosen Option : --

Q.15 Select the figure from the given options that will replace the question mark (?) in the figure given below to complete the pattern so that the final image is symmetrical.



Ans

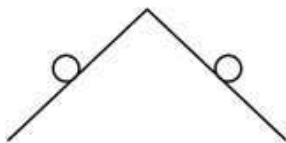
1.



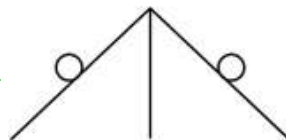
2.



3.



4.



Question ID : 264330114734

Option 1 ID : 264330451024

Option 2 ID : 264330451021

Option 3 ID : 264330451023

Option 4 ID : 264330451022

Status : Answered

Chosen Option : 4

Q.16 Select the option that is related to the fourth term in the same way as the first term is related to the second term and the fifth term is related to the sixth term.
21 : 35 :: ? : 31 :: 23 : 37

- Ans
- 1. 19
 - 2. 18
 - 3. 20
 - 4. 17

Question ID : 26433052094
Option 1 ID : 264330203680
Option 2 ID : 264330203679
Option 3 ID : 264330203681
Option 4 ID : 264330203678
Status : Answered
Chosen Option : 4

Q.17 Which two signs should be interchanged to make the following equation correct?

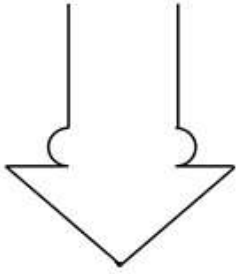
$$84 \div 6 + 9 - 12 \times 3 = 41$$

- Ans
- 1. - and ×
 - 2. + and ×
 - 3. + and ×
 - 4. - and +

Question ID : 264330101080
Option 1 ID : 264330396867
Option 2 ID : 264330396865
Option 3 ID : 264330396868
Option 4 ID : 264330396866
Status : Answered
Chosen Option : 4

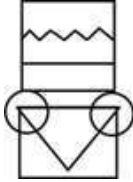
Adda247

Q.18 Select the option in which the given figure is embedded (rotation is NOT allowed).

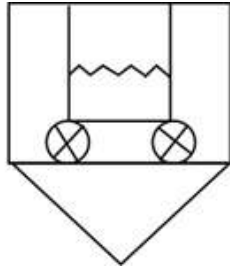


Ans


✗ 1.



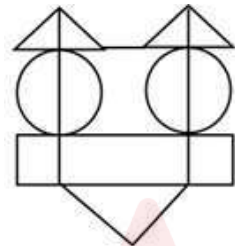
✓ 2.



✗ 3.



✗ 4.



Question ID : 264330119181

Option 1 ID : 264330467014

Option 2 ID : 264330467011

Option 3 ID : 264330467013

Option 4 ID : 264330467012

Status : Answered

Chosen Option : 2

Q.19 Select the number from the given options that can replace the question mark (?) in the following series.

9.9, 9, 8.2, 7.5, 6.9, ?

Ans ✗ 1. 6.1

✗ 2. 6.2

✓ 3. 6.4

✗ 4. 6.5

Question ID : 264330106383

Option 1 ID : 264330417835

Option 2 ID : 264330417836

Option 3 ID : 264330417833

Option 4 ID : 264330417834

Status : Answered

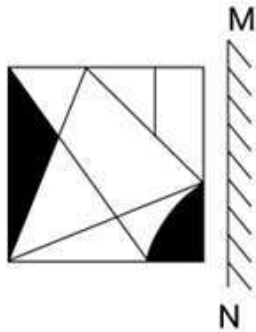
Chosen Option : 3

Q.20 If @ denotes \div , # denotes \times , \$ denotes $+$ and % denotes $-$, then what will be the value of the following equation?
 $9 \# 2 @ 2 \$ 9 \% 9 = ?$

- Ans
- 1. 36
 - 2. 27
 - 3. 9
 - 4. 18

Question ID : 26433085651
 Option 1 ID : 264330336306
 Option 2 ID : 264330336307
 Option 3 ID : 264330336308
 Option 4 ID : 264330336305
 Status : Answered
 Chosen Option : 3

Q.21 Select the correct mirror image of the given combination when the mirror is placed at 'MN' as shown below.

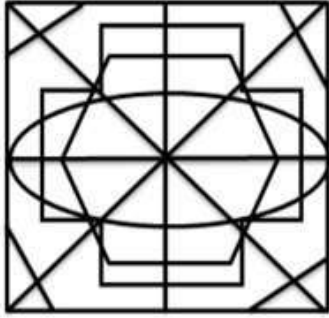


Ans

- 1.
- 2.
- 3.
- 4.

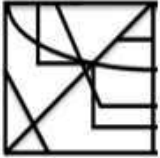
Question ID : 264330130770
 Option 1 ID : 264330512194
 Option 2 ID : 264330512192
 Option 3 ID : 264330512193
 Option 4 ID : 264330512191
 Status : Answered
 Chosen Option : 2

Q.22 Select the option figure that is embedded in the given figure. (Rotation is not allowed)

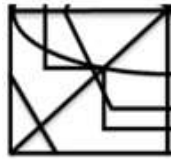


Ans

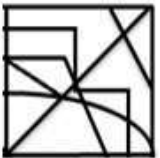
✗ 1.



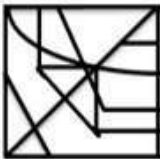
✓ 2.



✗ 3.



✗ 4.



Question ID : 264330114406

Option 1 ID : 264330449710

Option 2 ID : 264330449709

Option 3 ID : 264330449711

Option 4 ID : 264330449712

Status : Answered

Chosen Option : 2

Q.23 Select the option figure that will replace the question mark (?) in the figure given below to complete the pattern.



Ans

✗ 1.




✓ 2.



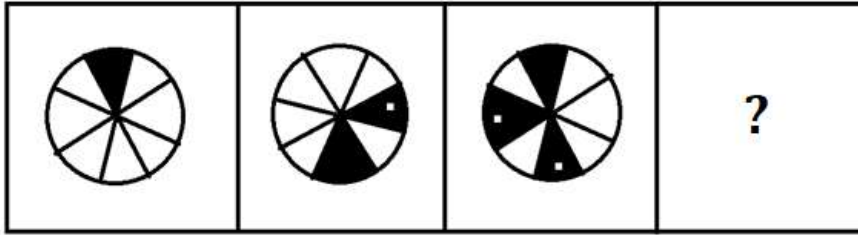
✗ 3.



✗ 4.



Q.24 Select the figure that will come next in the following figure series.



Ans

- 1.
- 2.
- 3.
- 4.

Q.25 Which figure should replace the question mark (?) in the following series to continue the pattern?

☆ 3	△ ☆	D △	S D	
△	D	S	A	?
S D	A S	7 A	□ 7	

Ans

✗ 1.

A S
7
D □

✗ 2.

A □
7
D S

✗ 3.

7 □
S
D A

✓ 4.

A S
7
+ □

Question ID : 264330129619

Option 1 ID : 264330507842

Option 2 ID : 264330507845

Option 3 ID : 264330507843

Option 4 ID : 264330507844

Status : Answered

Chosen Option : 4

Section : Numerical Ability

Q.1 The LCM of two numbers is 1728 and their HCF is 4. If one of the numbers is 64, then the other number is:

Ans ✗ 1. 54

✗ 2. 216

✓ 3. 108

✗ 4. 144

Question ID : 264330104226

Option 1 ID : 264330409207

Option 2 ID : 264330409206

Option 3 ID : 264330409205

Option 4 ID : 264330409208

Status : Answered

Chosen Option : 3

Q.2 एक व्यापारी अपने माल को विक्रय मूल्य पर 12.5% की हानि पर बेचता है। उसका हानि प्रतिशत ज्ञात करें।

Ans

1. $11\frac{1}{3}\%$

2. $10\frac{1}{9}\%$

3. $10\frac{1}{3}\%$

4. $11\frac{1}{9}\%$

Question ID : 264330111462

Option 1 ID : 264330437936

Option 2 ID : 264330437934

Option 3 ID : 264330437933

Option 4 ID : 264330437935

Status : Answered

Chosen Option : 4

Q.3 If A's income is 70% more than B's income, then what percentage less does B earn than A?

Ans

1. $35\frac{1}{7}\%$

2. $41\frac{3}{17}\%$

3. $43\frac{1}{17}\%$

4. $39\frac{3}{17}\%$

Question ID : 264330104490

Option 1 ID : 264330410261

Option 2 ID : 264330410263

Option 3 ID : 264330410264

Option 4 ID : 264330410262

Status : Answered

Chosen Option : 2

Q.4 A sum, when invested at $12\frac{1}{2}\%$ simple interest per annum, amounts to ₹8,250 after 2 years. The simple interest is:

Ans

1. ₹1,910

2. ₹1,700

3. ₹1,650

4. ₹1,820

Question ID : 264330118426

Option 1 ID : 264330465108

Option 2 ID : 264330465106

Option 3 ID : 264330465105

Option 4 ID : 264330465107

Status : Answered

Chosen Option : 3

Q.5 What is the number of wax balls, each of radius 2 cm, that can be moulded out of a sphere of radius 6 cm? (Use $\pi = \frac{22}{7}$)

- Ans
- 1. 26
 - 2. 27
 - 3. 24
 - 4. 25

Question ID : 264330109539
Option 1 ID : 264330430435
Option 2 ID : 264330430436
Option 3 ID : 264330430433
Option 4 ID : 264330430434
Status : Answered
Chosen Option : 2

Q.6 If the price of sugar falls by 30%, by how much per cent must a householder increase its consumption, so as NOT to decrease its expenditure on sugar?

- Ans
- 1. $38\frac{6}{7}\%$
 - 2. $42\frac{6}{7}\%$
 - 3. $35\frac{6}{7}\%$
 - 4. $41\frac{6}{7}\%$

Question ID : 264330109241
Option 1 ID : 264330429243
Option 2 ID : 264330429241
Option 3 ID : 264330429244
Option 4 ID : 264330429242
Status : Answered
Chosen Option : 2

Q.7 दो मित्रों राम और श्याम की आयु का अनुपात 5 : 3 है। यदि राम, श्याम से 12 वर्ष बड़ा है, तो श्याम की आयु कितनी है?

- Ans
- 1. 20 वर्ष
 - 2. 22 वर्ष
 - 3. 24 वर्ष
 - 4. 18 वर्ष

Question ID : 264330130094
Option 1 ID : 264330509608
Option 2 ID : 264330509609
Option 3 ID : 264330509610
Option 4 ID : 264330509607
Status : Answered
Chosen Option : 4

Q.8 A thief escaped with a bike, riding at the speed of 70 km/h. A policeman arrived at the spot of the theft an hour after the bike was stolen and started chasing the thief. If the policeman drove his vehicle at the speed of 84 km/h, for how many hours did the policeman have to drive before catching the thief?

Ans

1. $4\frac{1}{2}$

2. 5

3. $5\frac{2}{5}$

4. 6

Question ID : 264330183825

Option 1 ID : 264330720976

Option 2 ID : 264330720977

Option 3 ID : 264330720978

Option 4 ID : 264330720979

Status : Answered

Chosen Option : 2

Q.9 A tent is in the form of a right circular cylinder surmounted by a cone. The diameter of the cylinder is 32 m, and the height of the cylinder is 14 m, while the vertex of the cone is 26 m above the ground. What is the area of the canvas required for this tent? (Where $\pi = 3.14$)

Ans 1. 2047.94 m²

2. 3411.50 m²

3. 3011.42 m²

4. 2411.52 m²

Question ID : 264330118144

Option 1 ID : 264330464392

Option 2 ID : 264330464394

Option 3 ID : 264330464391

Option 4 ID : 264330464393

Status : Not Answered

Chosen Option : --

Q.10 What is the average of 1.7, 2.4, $\frac{3}{5}$, 4.34, 2.6 and 5 (rounded off to 3 decimal places)?

Ans 1. 1.973

2. 1.873

3. 1.937

4. 2.773

Question ID : 264330130295

Option 1 ID : 264330510291

Option 2 ID : 264330510294

Option 3 ID : 264330510293

Option 4 ID : 264330510292

Status : Answered

Chosen Option : 4

Q.11 If 56 workers earn ₹4,080 in 5 days, how much will 48 workers earn in 14 days?

- Ans 1. ₹5,698
 2. ₹9,792
 3. ₹9,122
 4. ₹5,968

Question ID : 264330182584
Option 1 ID : 264330716129
Option 2 ID : 264330716128
Option 3 ID : 264330716127
Option 4 ID : 264330716130
Status : Not Answered
Chosen Option : --

Q.12 The number of prime numbers between 301 and 320 is:

- Ans 1. 3
 2. 5
 3. 2
 4. 4

Question ID : 264330106074
Option 1 ID : 264330416599
Option 2 ID : 264330416600
Option 3 ID : 264330416597
Option 4 ID : 264330416598
Status : Answered
Chosen Option : 4

Q.13 The marked price of an article is ₹420. It is sold for ₹368. If there is a loss of 8%, then by what percentage above the cost price is the article marked?

- Ans 1. 6%
 2. 8%
 3. 5%
 4. 4%

Question ID : 264330129419
Option 1 ID : 264330507043
Option 2 ID : 264330507044
Option 3 ID : 264330507045
Option 4 ID : 264330507042
Status : Answered
Chosen Option : 4

Q.14 What is the sum of all the prime numbers between 57 and 75?

- Ans 1. 431
 2. 331
 3. 221
 4. 421

Question ID : 264330105988
Option 1 ID : 264330416256
Option 2 ID : 264330416253
Option 3 ID : 264330416254
Option 4 ID : 264330416255
Status : Answered
Chosen Option : 2

Q.15 A sum of money doubles itself in 10 years at compound interest. In how many years will it become sixteen times?

- Ans
- 1. 35
 - 2. 30
 - 3. 45
 - 4. 40

Question ID : 264330103981
Option 1 ID : 264330408227
Option 2 ID : 264330408228
Option 3 ID : 264330408225
Option 4 ID : 264330408226
Status : Answered
Chosen Option : 4

Section : Computer Proficiency

Q.1 Which of the following features in MS Excel 365 involves setting the system to adjust cells to fit their contents automatically so that all the information is visible?

- Ans
- 1. Fit sheet on one page
 - 2. Cellwidth
 - 3. AutoFit
 - 4. FittoCell

Question ID : 264330180409
Option 1 ID : 264330707603
Option 2 ID : 264330707606
Option 3 ID : 264330707604
Option 4 ID : 264330707605
Status : Answered
Chosen Option : 3

Q.2 What is the main objective of the Inbox within an email mailbox?

- Ans
- 1. To store received emails
 - 2. To schedule email reminders
 - 3. To use as trash can
 - 4. To manage contacts and address book

Question ID : 264330177647
Option 1 ID : 264330696705
Option 2 ID : 264330696706
Option 3 ID : 264330696703
Option 4 ID : 264330696704
Status : Answered
Chosen Option : 1

Q.3 Which action should be taken to copy and paste text within a MS word 365 document?

- Ans
- 1. Use the 'Find and Replace' function to copy and move text to the desired location.
 - 2. Drag and drop the text to the desired location within the document.
 - 3. Delete the text and retype it in the desired location to move it.
 - 4. Select the text, press 'Ctrl+C' to copy, and 'Ctrl+V' to paste it to the desired location.

Question ID : 264330173330
Option 1 ID : 264330679799
Option 2 ID : 264330679801
Option 3 ID : 264330679802
Option 4 ID : 264330679800
Status : Answered
Chosen Option : 4

Q.4 In Microsoft Word 365, what is the purpose of text formatting?

- Ans
- 1. Adding decorative images
 - 2. Modifying the appearance of text
 - 3. Changing the document's font
 - 4. Enhancing page layout

Question ID : 264330180711
Option 1 ID : 264330708812
Option 2 ID : 264330708814
Option 3 ID : 264330708811
Option 4 ID : 264330708813
Status : Answered
Chosen Option : 2

Q.5 In MS Excel 365, the COUNT function is used to _____.

- Ans
- 1. count the numbers in the dataset
 - 2. count the objects in the dataset
 - 3. count the rows in the dataset
 - 4. count the columns in the dataset

Question ID : 264330182053
Option 1 ID : 264330714053
Option 2 ID : 264330714054
Option 3 ID : 264330714051
Option 4 ID : 264330714052
Status : Answered
Chosen Option : 1

Q.6 In MS-Word 365, which option allows you to apply a specific style to a selected portion of text, such as changing the font, font size, color and other formatting attributes, while keeping the rest of the text unaffected?

- Ans
- 1. Character Style
 - 2. Format Painter
 - 3. Quick Style
 - 4. Clear Formatting

Question ID : 264330178090
Option 1 ID : 264330698425
Option 2 ID : 264330698424
Option 3 ID : 264330698423
Option 4 ID : 264330698426
Status : Answered
Chosen Option : 2

Q.7 Which of the following shortcut keys is used in MS Excel 365 to enter data on a new line within a cell, enter a line break?

- Ans**
- 1. Shift + Enter
 - 2. Ctrl + Enter
 - 3. Ctrl + Shift + Enter
 - 4. Alt + Enter

Question ID : 264330180415
Option 1 ID : 264330707628
Option 2 ID : 264330707627
Option 3 ID : 264330707630
Option 4 ID : 264330707629
Status : Answered
Chosen Option : 1

Q.8 In MS word 365 Which statement accurately describes the difference between bullets and numbering in document formatting?

- Ans**
- 1. Bullets are used for unordered lists, while numbering is used for ordered lists.
 - 2. Bullets can be applied to individual paragraphs, while numbering applies only to entire sections.
 - 3. Bullets and numbering both serve the same purpose and can be used interchangeably.
 - 4. Bullets and numbering are not applicable in document formatting and are used for graphic design purposes.

Question ID : 264330173329
Option 1 ID : 264330679795
Option 2 ID : 264330679797
Option 3 ID : 264330679796
Option 4 ID : 264330679798
Status : Answered
Chosen Option : 3

Q.9 What is the role of routers in Internet architecture?

- Ans**
- 1. To provide security for Internet connections
 - 2. To receive and send data on computer networks.
 - 3. To translate IP addresses into domain names
 - 4. To connect devices to the Internet

Question ID : 264330173557
Option 1 ID : 264330680710
Option 2 ID : 264330680709
Option 3 ID : 264330680708
Option 4 ID : 264330680707
Status : Answered
Chosen Option : 4

Q.10 How do we combine regions from multiple authors into a single Microsoft Word 365 document?

Ans ✓ 1. By Combine

✗ 2. By Block Authors

✗ 3. By Restrict Editing

✗ 4. By Compare

Question ID : 264330182088

Option 1 ID : 264330714192

Option 2 ID : 264330714194

Option 3 ID : 264330714193

Option 4 ID : 264330714191

Status : Answered

Chosen Option : 1



Constable Executive Male and Female in Delhi Police Examination 2023

Roll Number	
Candidate Name	
Venue Name	Shri S N Technologies
Exam Date	02/12/2023
Exam Time	9:00 AM - 10:30 AM
Subject	Constable Executive Male and Female in Delhi Police Examination 2023

Section : General Knowledge

Q.1 Which of the following is the key aspect of Constitutional bodies?

- Ans
- 1. Made by the Parliament
 - 2. Made by the President and PM
 - 3. Temporary status
 - 4. Mentioned in the Constitution

Question ID : 264330158677
Option 1 ID : 264330622067
Option 2 ID : 264330622069
Option 3 ID : 264330622070
Option 4 ID : 264330622068
Status : Answered
Chosen Option : 4

Q.2 Which State has the maximum strength of members in Lok Sabha?

- Ans
- 1. Andhra Pradesh
 - 2. Uttar Pradesh
 - 3. Karnataka
 - 4. Maharashtra

Question ID : 264330110135
Option 1 ID : 264330432820
Option 2 ID : 264330432818
Option 3 ID : 264330432819
Option 4 ID : 264330432817
Status : Answered
Chosen Option : 2

Q.3 What is the name of the phenomenon by which light splits into its component colours upon passing through a prism?

- Ans
- 1. Diffraction
 - 2. Dispersion
 - 3. Reflection
 - 4. Refraction

Question ID : 264330177003
Option 1 ID : 264330694210
Option 2 ID : 264330694208
Option 3 ID : 264330694209
Option 4 ID : 264330694207
Status : Answered
Chosen Option : 1

Q.4 The dance-pavilion (mandapa), the vast complex within a quadrilateral precinct of the Odisha school of architecture, is known as _____.

- Ans
- 1. Jagamohana
 - 2. Vimana
 - 3. Deul
 - 4. Gopuram

Question ID : 264330111857
Option 1 ID : 264330439514
Option 2 ID : 264330439516
Option 3 ID : 264330439513
Option 4 ID : 264330439515
Status : Answered
Chosen Option : 2

Q.5 Who among the following Buddhist monks came from China to India during the reign of Chandragupta II?

- Ans
- 1. Song Yun
 - 2. Fa-Hien
 - 3. Hiuen-Tsang
 - 4. I-Tsing

Question ID : 264330182694
Option 1 ID : 264330716549
Option 2 ID : 264330716547
Option 3 ID : 264330716550
Option 4 ID : 264330716548
Status : Answered
Chosen Option : 3

Q.6 The Lingayats community of present-day Karnataka originated in the 12th century CE due to the emergence of a movement led by _____.

- Ans
- 1. Tevaram
 - 2. Basavanna
 - 3. Sambandar
 - 4. Shivanaris

Question ID : 264330118969
Option 1 ID : 264330466532
Option 2 ID : 264330466533
Option 3 ID : 264330466534
Option 4 ID : 264330466531
Status : Answered
Chosen Option : 4

Q.7 Which of the following movements was started by Khan Abdul Ghaffar Khan?

- Ans
- 1. Khudai Khidmatgars
 - 2. Ghadhar Movement
 - 3. The Deccan Revolt
 - 4. Individual Satyagraha

Question ID : 264330114113
Option 1 ID : 264330448539
Option 2 ID : 264330448538
Option 3 ID : 264330448537
Option 4 ID : 264330448540
Status : Answered
Chosen Option : 1

Q.8 Khamlam and Cheraw are the dance forms of which of the following states?

- Ans 1. Manipur
 2. Mizoram
 3. Assam
 4. Tripura

Question ID : 264330110418
Option 1 ID : 264330433950
Option 2 ID : 264330433949
Option 3 ID : 264330433951
Option 4 ID : 264330433952
Status : Answered
Chosen Option : 4

Q.9 Which of the given statements about Phylum Angiosperms are correct?

- A. Angiosperms are non-vascular plants with stems, roots and leaves.
B. The seeds of the angiosperm are naked.
C. These make up the majority of all plants on earth.
D. The seeds develop inside the plant organs and form fruit.

- Ans 1. Only A and C
 2. Only C and D
 3. Only A, B and C
 4. Only B, C and D

Question ID : 264330137999
Option 1 ID : 264330540603
Option 2 ID : 264330540606
Option 3 ID : 264330540604
Option 4 ID : 264330540605
Status : Answered
Chosen Option : 3

Q.10 What is the minimum age required for the appointment of a person as a governor?

- Ans 1. 30 years
 2. 25 years
 3. 35 years
 4. 18 years

Question ID : 264330173536
Option 1 ID : 264330680625
Option 2 ID : 264330680624
Option 3 ID : 264330680626
Option 4 ID : 264330680623
Status : Answered
Chosen Option : 1

Q.11 Which of the following neighbouring countries of India ranks the least in Human Development Index (HDI) 2021-22 among other countries?

- Ans
- 1. Bangladesh
 - 2. Afghanistan
 - 3. Pakistan
 - 4. Myanmar

Question ID : 264330120352
Option 1 ID : 264330471660
Option 2 ID : 264330471662
Option 3 ID : 264330471659
Option 4 ID : 264330471661
Status : Answered
Chosen Option : 1

Q.12 Which of the following pairs is correctly matched?

- Ans
- 1. Third man – Cricket
 - 2. Header – Hockey
 - 3. Dribble – Hockey
 - 4. Bicycle kick – Basketball

Question ID : 264330118912
Option 1 ID : 264330466304
Option 2 ID : 264330466303
Option 3 ID : 264330466306
Option 4 ID : 264330466305
Status : Answered
Chosen Option : 1

Q.13 In which of the following Articles of the Constitution of India is it mentioned that It shall be the duty of every citizen of India to defend the country and render national service when called upon to do so?

- Ans
- 1. 51A (i)
 - 2. 51A (k)
 - 3. 51A (d)
 - 4. 51A (j)

Question ID : 264330133058
Option 1 ID : 264330521284
Option 2 ID : 264330521286
Option 3 ID : 264330521283
Option 4 ID : 264330521285
Status : Answered
Chosen Option : 3

Q.14 Who was the first president of the All-India Trade Union Congress?

- Ans
- 1. Lala Lajpat Rai
 - 2. MN Roy
 - 3. NM Lokhande
 - 4. Lokmanya Tilak

Question ID : 264330120300
Option 1 ID : 264330471452
Option 2 ID : 264330471453
Option 3 ID : 264330471454
Option 4 ID : 264330471451
Status : Answered
Chosen Option : 4

Q.15 The first five year plan was presented to the parliament by which of the following personalities?

- Ans 1. Jawaharlal Nehru
 2. Indira Gandhi
 3. PC Mahalanobis
 4. Rajendra Prasad

Question ID : 264330117741
Option 1 ID : 264330462782
Option 2 ID : 264330462781
Option 3 ID : 264330462779
Option 4 ID : 264330462780
Status : Answered
Chosen Option : 3

Q.16 Who was selected as the 'Best Male Athlete' in the National Games-2022?

- Ans 1. Sajan Prakash
 2. Siva Subramani
 3. Jeswin Aldrin
 4. Ram Baboo

Question ID : 264330113748
Option 1 ID : 264330447079
Option 2 ID : 264330447078
Option 3 ID : 264330447077
Option 4 ID : 264330447080
Status : Answered
Chosen Option : 2

Q.17 Which of the following fundamental duties is violated when a person purposefully spoils an ancient monument?

- Ans 1. To preserve our rich heritage and composite culture.
 2. To protect the unity and integrity of India.
 3. To develop a scientific outlook and humanism.
 4. To defend the country when the need arises.

Question ID : 264330116388
Option 1 ID : 264330457637
Option 2 ID : 264330457640
Option 3 ID : 264330457639
Option 4 ID : 264330457638
Status : Answered
Chosen Option : 1

Q.18 Which of the following is the correct pair of autobiography and its autobiographer?

- Ans 1. Long Walk to Freedom: Malcolm X
 2. Mein Kampf: Adolf Hitler
 3. On Writing: Ernest Hemingway
 4. Open: Anne Frank

Question ID : 26433071425
Option 1 ID : 264330280124
Option 2 ID : 264330280125
Option 3 ID : 264330280127
Option 4 ID : 264330280126
Status : Answered
Chosen Option : 3

Q.19 Which of the following Acts was replaced by the Competition Act 2002?

- Ans 1. LERMS
 2. FERA
 3. MRTP
 4. FEMA

Question ID : 26433059314
Option 1 ID : 264330232135
Option 2 ID : 264330232132
Option 3 ID : 264330232134
Option 4 ID : 264330232133
Status : Answered
Chosen Option : 4

Q.20 Which of the following plutonic rocks is usually black or dark green in colour and is mainly composed of plagioclase and augite minerals?

- Ans 1. Dolomite
 2. Gabbro
 3. Zeolites
 4. Quartzite

Question ID : 264330114166
Option 1 ID : 264330448749
Option 2 ID : 264330448752
Option 3 ID : 264330448750
Option 4 ID : 264330448751
Status : Answered
Chosen Option : 1

Q.21 What percentage of the water that falls on land returns to the atmosphere through evaporation from over the oceans as well as from other places?

- Ans 1. 29%
 2. 49%
 3. 59%
 4. 39%

Question ID : 264330134906
Option 1 ID : 264330528562
Option 2 ID : 264330528560
Option 3 ID : 264330528559
Option 4 ID : 264330528561
Status : Answered
Chosen Option : 2

Q.22 Consider the following statements with respect to the purpose of privatisation:

- (i) It improves financial discipline.
- (ii) It facilitates modernization.
- (iii) It helps in improving performance of the PSUs.

Choose the correct answer.

Ans 1. All (i), (ii) and (iii) are true

2. Only (ii) is true

3. Only (iii) is true

4. Only (i) is true

Question ID : 264330116558

Option 1 ID : 264330458320

Option 2 ID : 264330458318

Option 3 ID : 264330458319

Option 4 ID : 264330458317

Status : Answered

Chosen Option : 1

Q.23 Indian music director AR Rahman won the Oscar in the year _____.

Ans 1. 2009

2. 2008

3. 2005

4. 2011

Question ID : 264330114584

Option 1 ID : 264330450423

Option 2 ID : 264330450422

Option 3 ID : 264330450421

Option 4 ID : 264330450424

Status : Answered

Chosen Option : 4

Q.24 The promotion and development of a strong banking system is the function of _____

Ans 1. foreign bank

2. commercial bank

3. regional rural bank

4. central bank

Question ID : 264330120874

Option 1 ID : 264330473714

Option 2 ID : 264330473711

Option 3 ID : 264330473712

Option 4 ID : 264330473713

Status : Answered

Chosen Option : 4

Q.25 Which of the following is NOT an example of a public sector industry in India?

- Ans 1. Tata Iron and Steel company
 2. National Thermal Power Corporation
 3. Steel Authority of India Limit
 4. Bharat Heavy Electrical Limit

Question ID : 264330132717
Option 1 ID : 264330519966
Option 2 ID : 264330519965
Option 3 ID : 264330519964
Option 4 ID : 264330519963
Status : Answered
Chosen Option : 1

Q.26 Which Indian American music composer received the ASCAP Screen Music Awards 2020 for his NBC's drama series 'This is Us'?

- Ans 1. Sid Sriram
 2. Siddhartha Khosla
 3. Mickey Singh
 4. Paul Sabu

Question ID : 264330112514
Option 1 ID : 264330442142
Option 2 ID : 264330442143
Option 3 ID : 264330442144
Option 4 ID : 264330442141
Status : Not Answered
Chosen Option : --

Q.27 On which of the following days, that is celebrated as a national festival, did India become a Sovereign, Democratic and Republic state?

- Ans 1. Republic Day
 2. Independence Day
 3. Martyr's Day
 4. Gandhi Jayanti

Question ID : 264330118264
Option 1 ID : 264330464873
Option 2 ID : 264330464871
Option 3 ID : 264330464872
Option 4 ID : 264330464874
Status : Answered
Chosen Option : 1

Q.28 Who among the following led the rebels in Kanpur in the revolt of 1857?

- Ans 1. Taty Tope
 2. Nana Saheb Peshwa
 3. Kunwar Singh
 4. Birjis Qadr

Question ID : 264330120267
Option 1 ID : 264330471326
Option 2 ID : 264330471325
Option 3 ID : 264330471324
Option 4 ID : 264330471323
Status : Answered
Chosen Option : 2

Q.29 In which type of sale minimum 51% of stake of PSE is sold to private sector ?

- Ans
- 1. minority
 - 2. mixed
 - 3. standard
 - 4. strategic

Question ID : 264330117577
Option 1 ID : 264330462334
Option 2 ID : 264330462336
Option 3 ID : 264330462335
Option 4 ID : 264330462333
Status : Answered
Chosen Option : 4

Q.30 Which of the following trees are found in the Deciduous forests of India?

- Ans
- 1. Teak
 - 2. Ebony
 - 3. Rosewood
 - 4. Mahogany

Question ID : 264330179023
Option 1 ID : 264330702096
Option 2 ID : 264330702095
Option 3 ID : 264330702098
Option 4 ID : 264330702097
Status : Answered
Chosen Option : 4

Q.31 In which year was the Ranji Trophy cricket event series launched?

- Ans
- 1. 1938
 - 2. 1955
 - 3. 1934
 - 4. 1930

Question ID : 264330176078
Option 1 ID : 264330690607
Option 2 ID : 264330690608
Option 3 ID : 264330690609
Option 4 ID : 264330690610
Status : Not Answered
Chosen Option : --

Q.32 Who among the following is NOT associated with the introduction of Green Revolution in India?

- Ans
- 1. MS Swaminathan
 - 2. Inder kumar Gujral
 - 3. Vandana Shiva
 - 4. Norman Borlaug

Question ID : 26433011764
Option 1 ID : 264330439143
Option 2 ID : 264330439142
Option 3 ID : 264330439144
Option 4 ID : 264330439141
Status : Answered
Chosen Option : 2

Q.33 What is the full form of IOA?

- Ans
- 1. International Olympic Association
 - 2. Indian Olympic Amateur
 - 3. Indian Olympic Association
 - 4. India Olympic Association

Question ID : 264330118482
Option 1 ID : 264330465332
Option 2 ID : 264330465331
Option 3 ID : 264330465329
Option 4 ID : 264330465330
Status : Answered
Chosen Option : 1

Q.34 Which of the following is an example of Pteridophytes?

- Ans
- 1. Funaria
 - 2. Sphagnum
 - 3. Polytrichum
 - 4. Salvinia

Question ID : 264330113315
Option 1 ID : 264330445345
Option 2 ID : 264330445347
Option 3 ID : 264330445348
Option 4 ID : 264330445346
Status : Answered
Chosen Option : 1

Q.35 Kumudini Lakhia won the Padma Bhushan for which form of dance?

- Ans
- 1. Kathak
 - 2. Kathakali
 - 3. Kuchipudi
 - 4. Bharatnatyam

Question ID : 26433074881
Option 1 ID : 264330293614
Option 2 ID : 264330293612
Option 3 ID : 264330293615
Option 4 ID : 264330293613
Status : Answered
Chosen Option : 1

Q.36 According to Arthashastra, Megasthenes was a Greek ambassador sent by which of the following rulers?

- Ans
- 1. Seleucus I Nicator
 - 2. Leonidas I
 - 3. Peisistratos
 - 4. Pericles

Question ID : 264330171664
Option 1 ID : 264330673259
Option 2 ID : 264330673260
Option 3 ID : 264330673262
Option 4 ID : 264330673261
Status : Answered
Chosen Option : 1

Q.37 Which of the following dances is performed by monks and Lamas in monastery to ward off evils and spirits?

- Ans
- 1. Cham
 - 2. Kullu Nati
 - 3. Hikar
 - 4. Rauf

Question ID : 264330110433
Option 1 ID : 264330434009
Option 2 ID : 264330434010
Option 3 ID : 264330434012
Option 4 ID : 264330434011
Status : Answered
Chosen Option : 1

Q.38 Courage and Conviction: An Autobiography, is written by whom among the following army generals turned politicians?

- Ans
- 1. Bhuwan Chandra Khanduri
 - 2. Vijay Kumar Singh
 - 3. Joginder Jaswant Singh
 - 4. Rajyawardhan Singh Rathod

Question ID : 264330112858
Option 1 ID : 264330443520
Option 2 ID : 264330443518
Option 3 ID : 264330443517
Option 4 ID : 264330443519
Status : Answered
Chosen Option : 2

Q.39 Which Amendment Act established that Article 20 and 21 of the Constitution of India cannot be suspended, even in emergency?

- Ans
- 1. 41st Amendment Act
 - 2. 43rd Amendment Act
 - 3. 42nd Amendment Act
 - 4. 44th Amendment Act

Question ID : 264330110576
Option 1 ID : 264330434581
Option 2 ID : 264330434583
Option 3 ID : 264330434582
Option 4 ID : 264330434584
Status : Answered
Chosen Option : 3

Q.40 Who among the following made significant contribution to the formation of Hindustan Socialist Republican Association (HSRA) in 1928?

- Ans
- 1. Bal Gangadhar Tilak
 - 2. Lala Lajpat Rai
 - 3. Subhash Chandra Bose
 - 4. Bhagat Singh

Question ID : 264330123747
Option 1 ID : 264330485026
Option 2 ID : 264330485025
Option 3 ID : 264330485024
Option 4 ID : 264330485023
Status : Answered
Chosen Option : 4

Q.41 What is the term used for a group of people in India, who are always poor and those who are usually poor but who may sometimes have a little more money?

- Ans
- 1. Relative poor
 - 2. Churning poor
 - 3. Chronic poor
 - 4. Transient poor

Question ID : 264330119818
Option 1 ID : 264330469550
Option 2 ID : 264330469548
Option 3 ID : 264330469547
Option 4 ID : 264330469549
Status : Answered
Chosen Option : 2

Q.42 'Transform rural poor youth into an economically independent and globally relevant workforce' is the vision of which rural livelihood mission?

- Ans
- 1. Deen Dayal Upadhyaya Grameen Kaushalya Yojana
 - 2. Employment Assurance Scheme
 - 3. National Rural Employment Programme
 - 4. Pradhan Mantri Rozgar Yojana

Question ID : 264330130604
Option 1 ID : 264330511530
Option 2 ID : 264330511528
Option 3 ID : 264330511527
Option 4 ID : 264330511529
Status : Answered
Chosen Option : 1

Q.43 The Majuli festival of North-East India is celebrated on the banks of which river?

- Ans
- 1. Dhansiri
 - 2. Kolong
 - 3. Barak
 - 4. Luit

Question ID : 264330110454
Option 1 ID : 264330434095
Option 2 ID : 264330434096
Option 3 ID : 264330434093
Option 4 ID : 264330434094
Status : Answered
Chosen Option : 1

Q.44 Which of the following trophic levels has maximum energy?

- Ans 1. Trophic level-1
 2. Trophic level-3
 3. Trophic level-2
 4. Trophic level-4

Question ID : 264330120958
Option 1 ID : 264330474047
Option 2 ID : 264330474049
Option 3 ID : 264330474048
Option 4 ID : 264330474050
Status : Answered
Chosen Option : 1

Q.45 Which traditional dance of Goa is performed during the Shigmo festival?

- Ans 1. Lavani
 2. Jagar
 3. Morulem
 4. Kalbelia

Question ID : 264330111790
Option 1 ID : 264330439246
Option 2 ID : 264330439247
Option 3 ID : 264330439245
Option 4 ID : 264330439248
Status : Answered
Chosen Option : 3

Q.46 Which of following states/union territories is a leading producer of saffron?

- Ans 1. Arunachal Pradesh
 2. Jammu and Kashmir
 3. Uttarakhand
 4. Punjab

Question ID : 264330183059
Option 1 ID : 264330717971
Option 2 ID : 264330717970
Option 3 ID : 264330717968
Option 4 ID : 264330717969
Status : Answered
Chosen Option : 2

Q.47 Vivekananda Rock Memorial, a place of great scenic beauty, is located in _____, which has both historical and religious significance.

- Ans 1. Chennai
 2. Hyderabad
 3. Mangalore
 4. Kanyakumari

Question ID : 264330111852
Option 1 ID : 264330439493
Option 2 ID : 264330439495
Option 3 ID : 264330439496
Option 4 ID : 264330439494
Status : Answered
Chosen Option : 4

Q.48 Who among the following was the author of Gita Govinda, composed during the reign of Lakshmana Sena?

- Ans 1. Vishakhadatta
 2. Jayadeva
 3. Somadeva
 4. Vatsyayana

Question ID : 264330176887
Option 1 ID : 264330693750
Option 2 ID : 264330693749
Option 3 ID : 264330693748
Option 4 ID : 264330693747
Status : Answered
Chosen Option : 2

Q.49 Fundamental duties are narrated in which Article of the Indian Constitution?

- Ans 1. Article 16 (A)
 2. Article 21
 3. Article 51 (A)
 4. Article 42

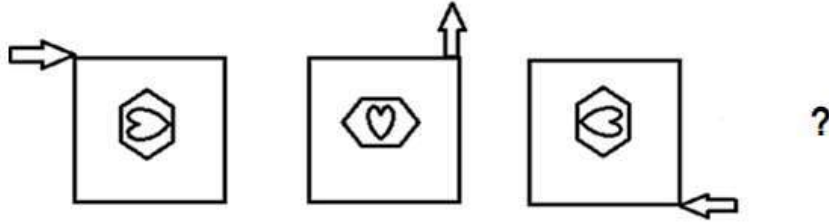
Question ID : 264330116386
Option 1 ID : 264330457629
Option 2 ID : 264330457630
Option 3 ID : 264330457632
Option 4 ID : 264330457631
Status : Answered
Chosen Option : 3

Q.50 Which of the following is NOT an important and direct contribution of a well-developed commercial banking sector?

- Ans 1. Facilitation of successful implementation of the monetary policy
 2. Mobilisation of savings
 3. Establishment of the agricultural market
 4. Capital formation

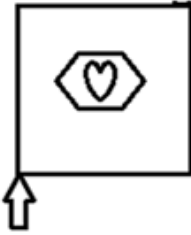
Question ID : 264330118154
Option 1 ID : 264330464433
Option 2 ID : 264330464431
Option 3 ID : 264330464434
Option 4 ID : 264330464432
Status : Answered
Chosen Option : 3

Q.1 Select the figure that can replace the question mark (?) in the following series.

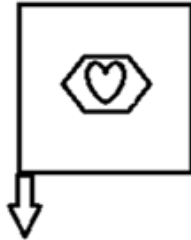


Ans

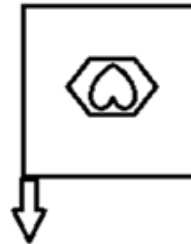
✗ 1.



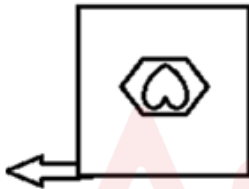
✗ 2.



✓ 3.



✗ 4.



Question ID : 264330118231

Option 1 ID : 264330464739

Option 2 ID : 264330464741

Option 3 ID : 264330464740

Option 4 ID : 264330464742

Status : Answered

Chosen Option : 3

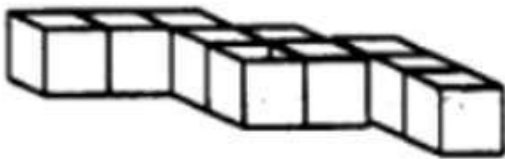
Q.2 Select the option that is related to the fifth letter-cluster in the same way as the second letter-cluster is related to the first letter-cluster and the fourth letter-cluster is related to the third letter-cluster.

SIGN : JCEO :: ONLY : UHJK :: MORE : ?

- Ans
- 1. ANLJ
 - 2. ANKI
 - 3. BMLI
 - 4. BNKI

Question ID : 26433076460
Option 1 ID : 264330299905
Option 2 ID : 264330299906
Option 3 ID : 264330299904
Option 4 ID : 264330299907
Status : Answered
Chosen Option : 2

Q.3 How many cubes are there in the given figure?



- Ans
- 1. 10
 - 2. 11
 - 3. 12
 - 4. 13

Question ID : 26433080661
Option 1 ID : 264330316579
Option 2 ID : 264330316578
Option 3 ID : 264330316577
Option 4 ID : 264330316580
Status : Answered
Chosen Option : 1

Q.4 Select the number from among the given options that can replace the question mark (?) in the following series.

5, 6, 8, 12, 20, ?

- Ans
- 1. 13
 - 2. 34
 - 3. 32
 - 4. 36

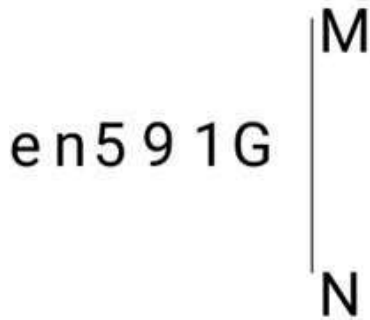
Question ID : 264330109764
Option 1 ID : 264330431336
Option 2 ID : 264330431334
Option 3 ID : 264330431335
Option 4 ID : 264330431333
Status : Answered
Chosen Option : 4

Q.5 Which of the following letter clusters will replace the question mark (?) in the given series to make it logically complete?
EHD, GJF, ILH, KNJ, ?

- Ans
- 1. MQL
 - 2. MPL
 - 3. NPK
 - 4. MPK

Question ID : 264330102231
Option 1 ID : 264330401391
Option 2 ID : 264330401390
Option 3 ID : 264330401389
Option 4 ID : 264330401392
Status : Answered
Chosen Option : 2

Q.6 Select the correct mirror image of the given figure when the mirror is placed at MN as shown below.




- Ans
- 1. ɹ19 ǝnə
 - 2. ɹ19 ǝnə
 - 3. ɹ19 ǝnə
 - 4. ɹ19 ǝnə

Question ID : 264330126680
Option 1 ID : 264330496394
Option 2 ID : 264330496392
Option 3 ID : 264330496395
Option 4 ID : 264330496393
Status : Answered
Chosen Option : 3

Q.7 Which of the following option figures will complete the pattern in the figure given below?



Ans



Question ID : 26433080605

Option 1 ID : 264330316353

Option 2 ID : 264330316356

Option 3 ID : 264330316354

Option 4 ID : 264330316355

Status : Answered

Chosen Option : 4

Adda247

Q.8 Select the figure from among the given options that can replace the question mark (?) in the following series.

# + % * =	= * % + #	* # % = +	+ = % # *	?
(i)	(ii)	(iii)	(iv)	(v)

Ans

✗ 1.

+ = % # *

✗ 2.

+ % = *

✓ 3.

= * % + #

✗ 4.

= * % # +

Question ID : 264330106547

Option 1 ID : 264330418492

Option 2 ID : 264330418491

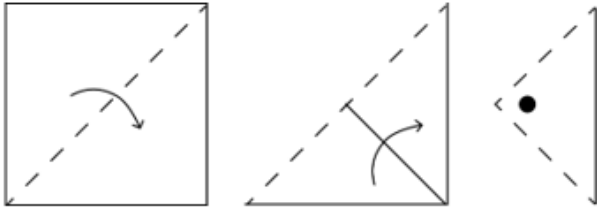
Option 3 ID : 264330418490

Option 4 ID : 264330418489

Status : Answered


Chosen Option : 3

Q.9 A square sheet of paper is folded along the dotted line successively along the directions shown and is then punched in the last. How would the paper look when unfolded?

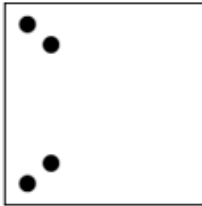


Ans


1.




2.



3.



4.



Question ID : 264330172149

Option 1 ID : 264330675173

Option 2 ID : 264330675174

Option 3 ID : 264330675172

Option 4 ID : 264330675171

Status : Answered

Chosen Option : 3

Q.10 1 is related to 24 following a certain logic. Following the same logic, 16 is related to 84.

To which of the following is 21 related, following the same logic?

(NOTE: Operations should be performed on the whole numbers, without breaking down the numbers into its constituent digits. E.g. 13 – Operations on 13 such as adding/subtracting/multiplying etc. to 13 can be performed. Breaking down 13 into 1 and 3 and then performing mathematical operations on 1 and 3 is not allowed.)

Ans 1. 108

2. 98

3. 104

4. 112

Question ID : 264330175606

Option 1 ID : 264330688743

Option 2 ID : 264330688745

Option 3 ID : 264330688746

Option 4 ID : 264330688744

Status : Answered

Chosen Option : 3

Q.11 Which of the following option figures will complete the pattern in the figure given below?



Ans



Question ID : 26433080621

Option 1 ID : 264330316418

Option 2 ID : 264330316417

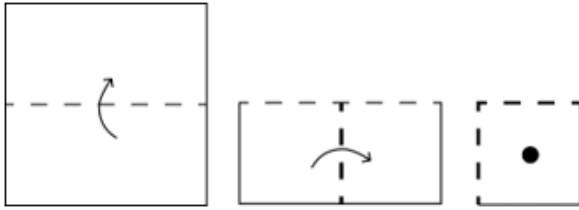
Option 3 ID : 264330316419

Option 4 ID : 264330316420

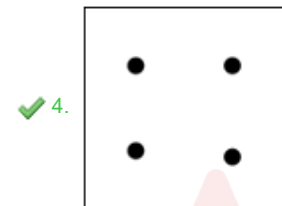
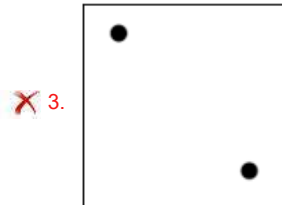
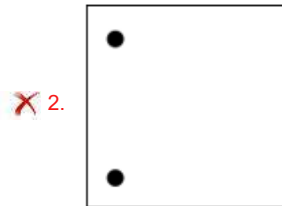
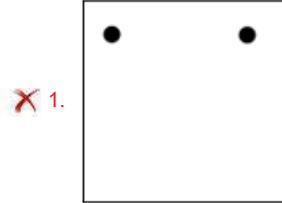
Status : Answered

Chosen Option : 4

Q.12 A square sheet of paper is folded along the dotted line successively along the directions shown and is then punched in the last. How would the paper look when unfolded?



Ans



Question ID : 264330172154

Option 1 ID : 264330675192

Option 2 ID : 264330675191

Option 3 ID : 264330675194

Option 4 ID : 264330675193

Status : Answered

Chosen Option : 4

Q.13 Select the correct mirror image of the given figure when the mirror is placed at 'AB' as shown.



Ans

✓ 1.

✗ 2.

✗ 3.

✗ 4.

Question ID : 264330114694

Option 1 ID : 264330450863

Option 2 ID : 264330450861

Option 3 ID : 264330450862

Option 4 ID : 264330450864

Status : Answered

Chosen Option : 1

Q.14 In a code language, if RIVER is coded as 9-18-5-22-9 and VALLEY is coded as 5-26-15-15-22-2, then how will MOUNTAIN be coded?

Ans ✗ 1. 14-11-6-12-6-26-18-13

✗ 2. 15-13-7-14-8-1-19-14

✓ 3. 14-12-6-13-7-26-18-13

✗ 4. 13-11-5-12-6-25-17-12

Question ID : 26433089484

Option 1 ID : 264330351437

Option 2 ID : 264330351438

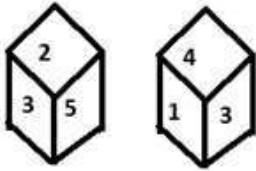
Option 3 ID : 264330351440

Option 4 ID : 264330351439

Status : Answered

Chosen Option : 3

Q.15 Six numbers 1, 2, 3, 4, 5 and 6 are written on different faces of a dice. Two positions of this dice are shown in the figure. Find the number on the face opposite to 3.



- Ans
- 1. 2
 - 2. 6
 - 3. 1
 - 4. 5

Question ID : 264330117904

Option 1 ID : 264330463433

Option 2 ID : 264330463434

Option 3 ID : 264330463431

Option 4 ID : 264330463432

Status : Answered

Chosen Option : 2

Q.16 Select the set in which the numbers are related in the same way as are the numbers of the following sets.

(NOTE : Operations should be performed on the whole numbers, without breaking down the numbers into its constituent digits. E.g. 13 – Operations on 13 such as adding/subtracting/multiplying etc. to 13 can be performed. Breaking down 13 into 1 and 3 and then performing mathematical operations on 1 and 3 is not allowed)

(30, 2, 3)

(100, 4, 5)

- Ans
- 1. (100, 6, 4)
 - 2. (64, 4, 2)
 - 3. (75, 3, 5)
 - 4. (120, 7, 3)

Question ID : 26433087043

Option 1 ID : 264330341816

Option 2 ID : 264330341814

Option 3 ID : 264330341813

Option 4 ID : 264330341815

Status : Answered

Chosen Option : 3

Q.17 Two statements are given, followed by three conclusions numbered I, II and III. Assuming the statements to be true, even if they seem to be at variance with commonly known facts, decide which of the conclusions logically follow(s) from the statements.

Statements:

All roses are lilies.

All lilies are flowers.

Conclusions:

I. All roses are flowers.

II. Some roses are not flowers.

III. No rose is a flower.

- Ans**
- 1. Only conclusion III follows
 - 2. Either conclusion I or III follows
 - 3. Only conclusion I follows
 - 4. Only conclusion II follows

Question ID : 26433068827

Option 1 ID : 264330269822

Option 2 ID : 264330269823

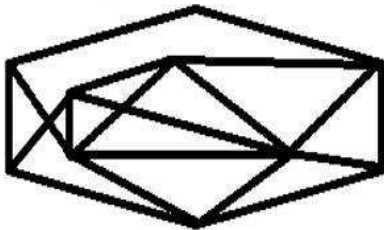
Option 3 ID : 264330269820

Option 4 ID : 264330269821

Status : Answered

Chosen Option : 3

Q.18 Select the option figure which is embedded in the given figure. (Rotation is not allowed.)



Ans

- 1.
- 2.
- 3.
- 4.

Question ID : 26433080749

Option 1 ID : 264330316931

Option 2 ID : 264330316930

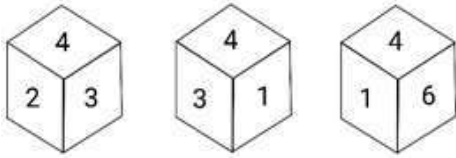
Option 3 ID : 264330316929

Option 4 ID : 264330316932

Status : Answered

Chosen Option : 2

Q.19 Three different positions of the same dice are shown. Find the number on the face opposite the face showing '6'.



- Ans
- 1. 4
 - 2. 3
 - 3. 2
 - 4. 1

Question ID : 264330116960
 Option 1 ID : 264330459923
 Option 2 ID : 264330459921
 Option 3 ID : 264330459924
 Option 4 ID : 264330459922
 Status : Answered
 Chosen Option : 2

Q.20 Which figure should replace the question mark (?) if the series were to be continued?



- Ans
- 1.

S	
Z	
D	
E	O
 - 2.

D	
Z	
S	
O	E
 - 3.

D	
O	
S	
X	Z
 - 4.

S	
Z	
D	
X	O

Question ID : 264330130791
 Option 1 ID : 264330512275
 Option 2 ID : 264330512278
 Option 3 ID : 264330512276
 Option 4 ID : 264330512277
 Status : Answered
 Chosen Option : 1

Q.21 Select the correct combination of mathematical signs that can sequentially replace the * signs and balance the given expression.
 $101 * 32 * 4 * 5 * 7 * 128$

Ans 1. -, ×, +, ÷, =

2. -, ÷, +, ×, =

3. +, +, ×, -, =

4. +, ×, -, ÷, =

Question ID : 26433074787

Option 1 ID : 264330293239

Option 2 ID : 264330293237

Option 3 ID : 264330293236

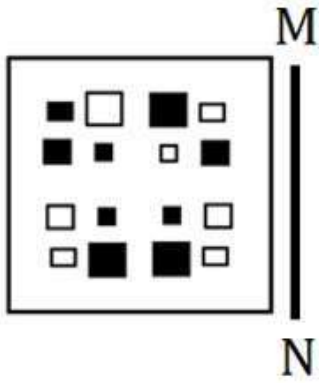
Option 4 ID : 264330293238

Status : Answered

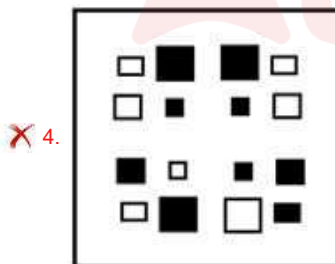
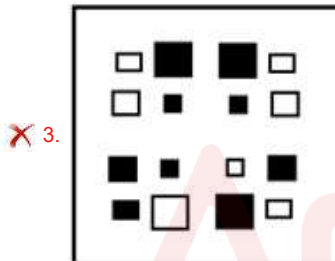
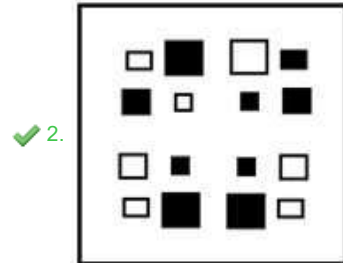
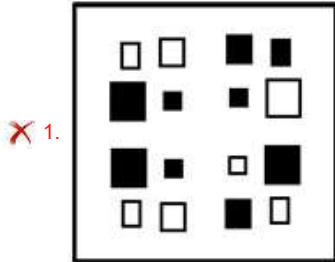
Chosen Option : 2



Q.22 Select the correct mirror image of the given figure when the mirror is placed at MN as shown below.



Ans



Question ID : 264330113100

Option 1 ID : 264330444485

Option 2 ID : 264330444487

Option 3 ID : 264330444488

Option 4 ID : 264330444486

Status : Answered

Chosen Option : 2

Q.23 Which figure should replace the question mark (?) in the following series to continue the pattern?

Y O U T H	O A T B H	H O A T B	O C T S B	?
-----------	-----------	-----------	-----------	---

Ans

✓ 1. B O C T S

✗ 2. C O T B S

✗ 3. C T S B O

✗ 4. T O C B S

Question ID : 264330129609

Option 1 ID : 264330507804

Option 2 ID : 264330507803

Option 3 ID : 264330507802

Option 4 ID : 264330507805

Status : Answered

Chosen Option : 1

Q.24 Which two signs should be interchanged to make the given equation correct?

$$88 \div 4 - 15 \times 3 = 1 + 4$$

Ans ✗ 1. = and +

✗ 2. = and -

✗ 3. = and ×

✓ 4. = and ÷

Question ID : 26433085736

Option 1 ID : 264330336647

Option 2 ID : 264330336646

Option 3 ID : 264330336648

Option 4 ID : 264330336645

Status : Answered

Chosen Option : 4

Q.25 Six friends, J, K, L, M, N and O, are sitting on a circular bench, facing away from the centre but not necessarily in the same order. O and J are the neighbours of N. M is sitting to the immediate right of J. L is sitting third to the left of N. Who is sitting second to the right of M?

- Ans
- 1. N
 - 2. K
 - 3. O
 - 4. L

Question ID : 26433089543
Option 1 ID : 264330351675
Option 2 ID : 264330351674
Option 3 ID : 264330351676
Option 4 ID : 264330351673
Status : Answered
Chosen Option : 2

Section : Numerical Ability

Q.1 What is the percentage change in the population if the total number of persons was 245000 in 2021 and 294000 in 2022?

- Ans
- 1. 20% increase
 - 2. 16.67 % decrease
 - 3. 15% increase
 - 4. 22% increase

Question ID : 264330103307
Option 1 ID : 264330405533
Option 2 ID : 264330405534
Option 3 ID : 264330405535
Option 4 ID : 264330405536
Status : Answered
Chosen Option : 1

Q.2 Mohit purchased a table for ₹3,500 and due to some scratches on it top, he sold it for ₹3,200. What is his loss percentage (rounded off to two decimals)?

- Ans
- 1. 8.56%
 - 2. 8.57%
 - 3. 8.58%
 - 4. 8.55%

Question ID : 264330122568
Option 1 ID : 264330480396
Option 2 ID : 264330480397
Option 3 ID : 264330480398
Option 4 ID : 264330480395
Status : Answered
Chosen Option : 2

Q.3 A hemispherical bowl has 7 cm radius. It is to be painted inside as well as outside. The cost (in ₹) of painting it at the rate of ₹6 per 4 cm^2 is: (Take $\pi = \frac{22}{7}$)

- Ans
- 1. 785
 - 2. 980
 - 3. 880
 - 4. 924

Question ID : 264330109952
Option 1 ID : 264330432086
Option 2 ID : 264330432088
Option 3 ID : 264330432085
Option 4 ID : 264330432087
Status : Answered
Chosen Option : 4

Q.4 A alone can finish a work in 12 days and B can finish it in 18 days. If they work together and finish it, then out of the total of ₹6,000, A will get:

- Ans
- 1. ₹3,800
 - 2. ₹3,600
 - 3. ₹2,400
 - 4. ₹3,200

Question ID : 264330104207
Option 1 ID : 264330409132
Option 2 ID : 264330409131
Option 3 ID : 264330409129
Option 4 ID : 264330409130
Status : Answered
Chosen Option : 2

Q.5 The smallest 5-digit prime number is:

- Ans
- 1. 10007
 - 2. 10003
 - 3. 10001
 - 4. 10009

Question ID : 264330104481
Option 1 ID : 264330410228
Option 2 ID : 264330410226
Option 3 ID : 264330410225
Option 4 ID : 264330410227
Status : Answered
Chosen Option : 3

Q.6 If the average of ten numbers is 16.2 and if 3 is subtracted from each number, then the new average of the ten numbers is:

- Ans
- 1. 16.1
 - 2. 13.2
 - 3. 15.1
 - 4. 14.3

Question ID : 264330119394
Option 1 ID : 264330467863
Option 2 ID : 264330467864
Option 3 ID : 264330467866
Option 4 ID : 264330467865
Status : Answered
Chosen Option : 2

Q.7 A trader marked his goods at 12% above the cost price. He sold half the stock at the marked price, one quarter at a discount of 12% on the marked price and the rest at a discount of 30% on the marked price. His total gain is:

- Ans
- 1. 0.24%
 - 2. 1.24%
 - 3. 1.85%
 - 4. 0.79%

Question ID : 264330183857
Option 1 ID : 264330721104
Option 2 ID : 264330721105
Option 3 ID : 264330721106
Option 4 ID : 264330721107
Status : Answered
Chosen Option : 1

Q.8 At simple interest, a certain sum of money amounts to ₹1,250 in 2 years and to ₹2,000 in 5 years. The rate of interest per annum (rounded off to two places of decimal) is:

- Ans
- 1. 27.27%
 - 2. 33.33%
 - 3. 11.11%
 - 4. 16.67%

Question ID : 264330182514
Option 1 ID : 264330715849
Option 2 ID : 264330715850
Option 3 ID : 264330715847
Option 4 ID : 264330715848
Status : Answered
Chosen Option : 2

Q.9 Find the greatest number by which, when the numbers 47, 95 and 187 are divided, it leaves the same remainder in each case.

- Ans 1.4
 2.8
 3.2
 4.6

Question ID : 264330104146
Option 1 ID : 264330408886
Option 2 ID : 264330408888
Option 3 ID : 264330408885
Option 4 ID : 264330408887
Status : Answered
Chosen Option : 1

Q.10 An athlete crosses a distance of 1800 m in 12 minutes. What is his speed in km per hour?

- Ans 1.7
 2.9
 3.8
 4.6

Question ID : 264330106013
Option 1 ID : 264330416354
Option 2 ID : 264330416356
Option 3 ID : 264330416355
Option 4 ID : 264330416353
Status : Answered
Chosen Option : 2

Q.11 Find the number of coins, 0.2 cm thick and 2 cm in diameter, to be melted to form a right circular cylinder of height 12 cm and diameter 5 cm.

- Ans 1.405
 2.425
 3.375
 4.470

Question ID : 264330118146
Option 1 ID : 264330464401
Option 2 ID : 264330464399
Option 3 ID : 264330464402
Option 4 ID : 264330464400
Status : Answered
Chosen Option : 3

Q.12 The difference between the CI and SI on a certain sum of money for 3 years at 4% percent per annum is ₹152. Find the sum invested.

- Ans
- 1. ₹31,275
 - 2. ₹31,225
 - 3. ₹31,250
 - 4. ₹31,200

Question ID : 264330106012
Option 1 ID : 264330416352
Option 2 ID : 264330416350
Option 3 ID : 264330416351
Option 4 ID : 264330416349
Status : Answered
Chosen Option : 3

Q.13 If the numerator of a fraction is increased by 17% and its denominator is decreased by 12%, the value of the fraction is $\frac{39}{44}$. What is the original fraction?

- Ans
- 1. $\frac{1}{3}$
 - 2. $\frac{3}{7}$
 - 3. $\frac{7}{8}$
 - 4. $\frac{2}{3}$

Question ID : 264330103936
Option 1 ID : 264330408045
Option 2 ID : 264330408047
Option 3 ID : 264330408046
Option 4 ID : 264330408048
Status : Answered
Chosen Option : 4

Q.14 If $\frac{p}{q} = 0.5$, then $\frac{3p-q}{3p+q}$ is:

- Ans
- 1. $\frac{1}{2}$
 - 2. $\frac{1}{5}$
 - 3. $\frac{1}{3}$
 - 4. $\frac{1}{4}$

Question ID : 264330111435
Option 1 ID : 264330437825
Option 2 ID : 264330437828
Option 3 ID : 264330437826
Option 4 ID : 264330437827
Status : Answered
Chosen Option : 2

Q.15 The salaries of P, Q and R are in the ratio 3:4:6. If R's salary is ₹15,000 more than that of P, then Q's salary is:

- Ans 1. ₹25,000
 2. ₹20,000
 3. ₹30,000
 4. ₹35,000

Question ID : 264330111468
Option 1 ID : 264330437958
Option 2 ID : 264330437957
Option 3 ID : 264330437959
Option 4 ID : 264330437960
Status : Answered
Chosen Option : 2

Section : Computer Proficiency

Q.1 Which of the following options can be used in MS Word 365 if you want to save your document in another location with the same or different name?

- Ans 1. Print
 2. Save As
 3. New
 4. Open

Question ID : 264330180433
Option 1 ID : 264330707702
Option 2 ID : 264330707701
Option 3 ID : 264330707700
Option 4 ID : 264330707699
Status : Answered
Chosen Option : 2

Q.2 In Microsoft Excel 365, what is the cell address of the intersection between column L and row 26?

- Ans 1. L26
 2. 125L
 3. 26L
 4. L125

Question ID : 264330174488
Option 1 ID : 264330684371
Option 2 ID : 264330684374
Option 3 ID : 264330684372
Option 4 ID : 264330684373
Status : Answered
Chosen Option : 1

Q.3 What is the purpose of the 'Help' feature in Microsoft Word 365?

- Ans 1. It allows you to print the current document.
2. It provides assistance and information about using Microsoft Word.
3. It opens a new blank document.
4. It creates a backup copy of the document.

Question ID : 264330180739
Option 1 ID : 264330708924
Option 2 ID : 264330708925
Option 3 ID : 264330708923
Option 4 ID : 264330708926
Status : Answered
Chosen Option : 2

Q.4 Which of the following is used to save text temporarily when it is copied or cut in MS word 365?

- Ans 1. Memoryboard
2. Clipboard
3. Textboard
4. Copyboard

Question ID : 264330176724
Option 1 ID : 264330693112
Option 2 ID : 264330693114
Option 3 ID : 264330693111
Option 4 ID : 264330693113
Status : Answered
Chosen Option : 2

Q.5 In MS Excel 365, which of the following keyboard shortcuts opens the Print option?

- Ans 1. Shift + P
2. Ctrl + P
3. Alt + P
4. Ctrl + Alt + P

Question ID : 264330180814
Option 1 ID : 264330709222
Option 2 ID : 264330709221
Option 3 ID : 264330709220
Option 4 ID : 264330709219
Status : Answered
Chosen Option : 2

Q.6 In MS-Word 365, what is the purpose of the 'Tell me what you want to do' feature in the Help menu?

- Ans 1. It automatically corrects formatting errors in the document.
2. It allows you to search for specific commands and features within the application.
3. It offers grammar and spelling suggestions for the selected text.
4. It provides a list of recent documents for quick access.

Question ID : 264330173358
Option 1 ID : 264330679914
Option 2 ID : 264330679912
Option 3 ID : 264330679913
Option 4 ID : 264330679911
Status : Answered
Chosen Option : 2

Q.7 In MS Excel 365, which of the following is the correct way to address the cell located in the third row and fifth column?

- Ans
- 1. 5A
 - 2. 35
 - 3. 3A
 - 4. E3

Question ID : 264330178558
Option 1 ID : 264330700262
Option 2 ID : 264330700260
Option 3 ID : 264330700259
Option 4 ID : 264330700261
Status : Answered
Chosen Option : 4

Q.8 Which of the following is used when the sender does NOT want one or more of the recipients to know that someone else was copied on the message?

- Ans
- 1. From
 - 2. BCC
 - 3. CC
 - 4. To

Question ID : 264330178235
Option 1 ID : 264330698998
Option 2 ID : 264330698996
Option 3 ID : 264330698995
Option 4 ID : 264330698997
Status : Answered
Chosen Option : 2

Q.9 What do you mean by LAN?

- Ans
- 1. Local Around Network
 - 2. Local Area Network
 - 3. Last Active Network
 - 4. Live Area Network

Question ID : 264330175502
Option 1 ID : 264330688328
Option 2 ID : 264330688330
Option 3 ID : 264330688329
Option 4 ID : 264330688327
Status : Answered
Chosen Option : 2

Q.10 In MS Word 365 which of the following shortcut keys is used to go to the beginning of the document?

- Ans**
- 1. Ctrl + Del
 - 2. Ctrl + End
 - 3. Ctrl + Home
 - 4. Ctrl + Ins

Question ID : 264330175987

Option 1 ID : 264330690244

Option 2 ID : 264330690245

Option 3 ID : 264330690243

Option 4 ID : 264330690246

Status : Answered

Chosen Option : 4



Constable Executive Male and Female in Delhi Police Examination 2023

Roll Number	
Candidate Name	
Venue Name	Digitrack IT Services
Exam Date	02/12/2023
Exam Time	12:00 PM - 1:30 PM
Subject	Constable Executive Male and Female in Delhi Police Examination 2023

Section : **General Knowledge**

Q.1 Read the below statements and select the correct option with respect to self-help groups.

- (i) A self-help group is a registered group of micro-entrepreneurs.
(ii) The micro-entrepreneurs of self-help groups have similar social and economic backgrounds.

- Ans 1. Both (i) and (ii) are true
 2. Both (i) and (ii) are false
 3. Only (ii) is true
 4. Only (i) is true

Question ID : 264330118239

Option 1 ID : 264330464773

Option 2 ID : 264330464774

Option 3 ID : 264330464772

Option 4 ID : 264330464771

Status : **Answered**

Chosen Option : 4

Q.2 Ranjeet Singh belonged to which Misal of the Sikh community?

- Ans 1. Bhangi
 2. Ahluwalia
 3. Kanhaiya
 4. Sukarchakia

Question ID : 264330118006

Option 1 ID : 264330463841

Option 2 ID : 264330463839

Option 3 ID : 264330463842

Option 4 ID : 264330463840

Status : **Answered**

Chosen Option : 4

Q.3 In which of the following years did young leaders in Satara in Maharashtra set up a parallel government Parti Sarkar that ran People's court and organised constructive work?

- Ans 1. 1943
 2. 1934
 3. 1918
 4. 1904

Question ID : 264330119015

Option 1 ID : 264330466715

Option 2 ID : 264330466716

Option 3 ID : 264330466717

Option 4 ID : 264330466718

Status : Not Attempted and Marked For Review

Chosen Option : --

Q.4 Ramchandra Manjhi, Padma Shri 2021 awardee, was conferred the award for which of the following contributions to art?

- Ans 1. Playing and folk singing of tribal Kinneras
 2. Conserving ancient Carnatic musical instruments
 3. Carrying forward the legacy of Gramin Natak and folk dancing
 4. Adapting the clarinet to Carnatic music

Question ID : 26433071516

Option 1 ID : 264330280489

Option 2 ID : 264330280488

Option 3 ID : 264330280491

Option 4 ID : 264330280490

Status : Answered

Chosen Option : 3

Q.5 Who among the following rulers strengthened the Satavahana empire in the Deccan in ancient India?

- Ans 1. Simuka
 2. Shiva Skanda Satakarni
 3. Yajna Sri Satakarni
 4. Gautamiputra Satakarni

Question ID : 264330120242

Option 1 ID : 264330471223

Option 2 ID : 264330471224

Option 3 ID : 264330471225

Option 4 ID : 264330471226

Status : Answered

Chosen Option : 4

Q.6 For which of the following dance forms was Kamalini Asthana awarded the Padma Shri in 2022?

- Ans
- 1. Odissi
 - 2. Kuchipudi
 - 3. Kathak
 - 4. Sattriya

Question ID : 26433011971
Option 1 ID : 264330439970
Option 2 ID : 264330439969
Option 3 ID : 264330439972
Option 4 ID : 264330439971
Status : Answered
Chosen Option : 3

Q.7 The Cholas as a ruling power rose to eminence in the 9th century CE when _____ seized Tanjavur from a feudatory chief of the Pallavas called Muttarayas.

- Ans
- 1. Parantaka I
 - 2. Rajaraja Chola I
 - 3. Vijayalaya
 - 4. Uttama Chola

Question ID : 264330119760
Option 1 ID : 264330469315
Option 2 ID : 264330469317
Option 3 ID : 264330469316
Option 4 ID : 264330469318
Status : Answered
Chosen Option : 3

Q.8 'The Race of My Life: An Autobiography' is written by which Indian athlete?

- Ans
- 1. Shivnath Singh
 - 2. PT Usha
 - 3. Milkha Singh
 - 4. Hima Das

Question ID : 26433092393
Option 1 ID : 264330362864
Option 2 ID : 264330362862
Option 3 ID : 264330362863
Option 4 ID : 264330362861
Status : Answered
Chosen Option : 3

Q.9 Taxes levied on commodities are known as which types of taxes?

- Ans
- 1. Corporation taxes
 - 2. Direct taxes
 - 3. Indirect taxes
 - 4. Both direct and indirect taxes

Question ID : 264330111608
Option 1 ID : 264330438518
Option 2 ID : 264330438517
Option 3 ID : 264330438519
Option 4 ID : 264330438520
Status : Answered
Chosen Option : 3

Q.10 Which Article of the Constitution of India declares the Supreme Court to be a court of record?

- Ans
- 1. Article 126
 - 2. Article 128
 - 3. Article 125
 - 4. Article 129

Question ID : 264330177761
Option 1 ID : 264330697152
Option 2 ID : 264330697153
Option 3 ID : 264330697151
Option 4 ID : 264330697154
Status : Answered
Chosen Option : 4

Q.11 Fort of Kushalgadh is located in which Indian state?

- Ans
- 1. Chhattisgarh
 - 2. Maharashtra
 - 3. Madhya Pradesh
 - 4. Uttar Pradesh

Question ID : 264330109650
Option 1 ID : 264330430879
Option 2 ID : 264330430880
Option 3 ID : 264330430878
Option 4 ID : 264330430877
Status : Answered
Chosen Option : 3

Q.12 The Gopurams of the Chidambaram temple contain many poses of which dance form?

- Ans
- 1. Kathakali
 - 2. Odissi
 - 3. Bharatnatyam
 - 4. Kuchipudi

Question ID : 264330110413
Option 1 ID : 264330433931
Option 2 ID : 264330433930
Option 3 ID : 264330433932
Option 4 ID : 264330433929
Status : Answered
Chosen Option : 3

Q.13 Which of the following statements is INCORRECT with regard to microfinance?

- Ans
- 1. Microfinance in India evolved to fill the gaps created by the formal banking institutions.
 - 2. Microfinance initiative in India was taken by NABARD.
 - 3. Microfinancing started in India majorly due the nationalisation of banks.
 - 4. The Reserve Bank of India had appointed the Malegam Committee to go into the regulation of microfinance institutions

Question ID : 264330112455
Option 1 ID : 264330441906
Option 2 ID : 264330441907
Option 3 ID : 264330441908
Option 4 ID : 264330441905
Status : Answered
Chosen Option : 3

Q.14 Against which oppressive law did Mahatma Gandhi launch a movement in 1919 that made him a truly national leader?

- Ans
- 1. Morley Minto Reforms
 - 2. Salt Tax
 - 3. Vernacular Press Act
 - 4. Rowlatt Act

Question ID : 264330118991
Option 1 ID : 264330466620
Option 2 ID : 264330466621
Option 3 ID : 264330466622
Option 4 ID : 264330466619
Status : Answered
Chosen Option : 4

Q.15 In the initial years of independence, the state had complete control of those industries that were:

- Ans
- 1. vital for the economy
 - 2. inconsequential to the economy
 - 3. only complementary to the policies of the private sector
 - 4. not profitable by design

Question ID : 264330117749
Option 1 ID : 264330462811
Option 2 ID : 264330462812
Option 3 ID : 264330462813
Option 4 ID : 264330462814
Status : Answered
Chosen Option : 1

Q.16 'Lai Haraoba' is a style of which of the following Classical dances of India?

- Ans
- 1. Kathakali
 - 2. Kathak
 - 3. Manipuri
 - 4. Odissi

Question ID : 264330114462
Option 1 ID : 264330449936
Option 2 ID : 264330449935
Option 3 ID : 264330449934
Option 4 ID : 264330449933
Status : Answered
Chosen Option : 3

Q.17 The Federal Structure, Judiciary, Governor System and Emergency Powers — these features of the Indian Constitution are drawn from the:_____

- Ans
- 1. Government of India Act of 1909
 - 2. Indian Independence Act of 1947
 - 3. Government of India Act of 1919
 - 4. Government of India Act of 1935

Question ID : 264330114743
Option 1 ID : 264330451057
Option 2 ID : 264330451060
Option 3 ID : 264330451058
Option 4 ID : 264330451059
Status : Answered
Chosen Option : 4

Q.18 When is the Maru Mahotsava at Jaisalmer held?

- Ans
- 1. March-April
 - 2. September-October
 - 3. November-December
 - 4. January-February

Question ID : 264330130874
Option 1 ID : 264330512608
Option 2 ID : 264330512609
Option 3 ID : 264330512610
Option 4 ID : 264330512607
Status : Not Answered
Chosen Option : --

Q.19 By which of the following authors was the English novel 'Jude the Obscure' written?

- Ans
- 1. Jane Austen
 - 2. Arthur Conan Doyle
 - 3. Charlotte Bronte
 - 4. Thomas Hardy

Question ID : 26433066681
Option 1 ID : 264330261249
Option 2 ID : 264330261248
Option 3 ID : 264330261250
Option 4 ID : 264330261251
Status : Not Answered
Chosen Option : --

Q.20 The first ICC Men's T20 Cricket World Cup was won by _____.

- Ans
- 1. West Indies
 - 2. India
 - 3. England
 - 4. Australia

Question ID : 264330130624
Option 1 ID : 264330511609
Option 2 ID : 264330511608
Option 3 ID : 264330511607
Option 4 ID : 264330511610
Status : Answered
Chosen Option : 2

Q.21 Which of the following is NOT a 'Navratna' or 'Maharatna' company in India?

- Ans
- 1. National Thermal Power Corporation
 - 2. Industrial Finance Corporation of India
 - 3. Indian Oil Corporation
 - 4. Oil & Natural Gas Corporation

Question ID : 264330109135
Option 1 ID : 264330428819
Option 2 ID : 264330428820
Option 3 ID : 264330428817
Option 4 ID : 264330428818
Status : Answered
Chosen Option : 2

Q.22 How many industries have been reserved for the public sector under the Industrial Policy Resolution, 1956?

- Ans 1. 17
 2. 21
 3. 2
 4. 15

Question ID : 264330110175

Option 1 ID : 264330432979

Option 2 ID : 264330432980

Option 3 ID : 264330432977

Option 4 ID : 264330432978

Status : **Not Attempted and Marked For Review**

Chosen Option : --

Q.23 Which of the following state High Court's jurisdiction extends to the Union Territories of Daman and Diu?

- Ans 1. Guwahati High Court
 2. Bombay High Court
 3. Kerala High Court
 4. Calcutta High Court

Question ID : 26433086841

Option 1 ID : 264330341005

Option 2 ID : 264330341006

Option 3 ID : 264330341007

Option 4 ID : 264330341008

Status : **Answered**

Chosen Option : 2

Q.24 Which of the following states showed highest levels of poverty, in the 2011 census?

- Ans 1. Uttar Pradesh
 2. Bihar
 3. Maharashtra
 4. Karnataka

Question ID : 264330120339

Option 1 ID : 264330471608

Option 2 ID : 264330471609

Option 3 ID : 264330471607

Option 4 ID : 264330471610

Status : **Answered**

Chosen Option : 2

Q.25 Budhaditya Mukharjee, Vilayat Khan and Mustaq Ali Khan are associated with which musical instrument?

- Ans
- 1. Surbahar
 - 2. Sarod
 - 3. Santoor
 - 4. Sitar

Question ID : 264330111190
Option 1 ID : 264330436848
Option 2 ID : 264330436845
Option 3 ID : 264330436847
Option 4 ID : 264330436846
Status : Answered
Chosen Option : 4

Q.26 Terrace farming is commonly practiced in which of the following regions of India?

- Ans
- 1. Himalayan region
 - 2. Thar Desert
 - 3. Gangetic Plains
 - 4. Coastal Plain

Question ID : 264330183061
Option 1 ID : 264330717976
Option 2 ID : 264330717978
Option 3 ID : 264330717977
Option 4 ID : 264330717979
Status : Answered
Chosen Option : 1

Q.27 In archery, what is the maximum time permitted to shoot an end of three arrows?

- Ans
- 1. 2 minutes
 - 2. 5 minutes
 - 3. 8 minutes
 - 4. 7 minutes

Question ID : 264330113775
Option 1 ID : 264330447185
Option 2 ID : 264330447186
Option 3 ID : 264330447188
Option 4 ID : 264330447187
Status : Not Attempted and Marked For Review
Chosen Option : --

Q.28 Name a genus of widely distributed floating aquatic plants that is the smallest monocot plant known to date and has the highest total protein content.

- Ans
- 1. Azolla
 - 2. Pistia
 - 3. Wolffia
 - 4. Water Hyacinth

Question ID : 26433055779
Option 1 ID : 264330218100
Option 2 ID : 264330218102
Option 3 ID : 264330218103
Option 4 ID : 264330218101
Status : Not Answered
Chosen Option : --

Q.29 What is the common biological phenomenon by which one organism produces biochemicals that influence the growth, survival, development, and reproduction of other organisms known as?

- Ans
- 1. Allotropy
 - 2. Allopathy
 - 3. Allelopathy
 - 4. Allelomorph

Question ID : 264330120960

Option 1 ID : 264330474055

Option 2 ID : 264330474056

Option 3 ID : 264330474058

Option 4 ID : 264330474057

Status : **Not Attempted and Marked For Review**

Chosen Option : --

Q.30 What is/are known as enzymes?

- Ans
- 1. Biological catalysts
 - 2. Physical activity
 - 3. Substrates
 - 4. Receptors

Question ID : 264330113341

Option 1 ID : 264330445450

Option 2 ID : 264330445452

Option 3 ID : 264330445451

Option 4 ID : 264330445449

Status : **Answered**

Chosen Option : 1

Q.31 'West Meets East' is an album by American violinist Yehudi Menuhin and Indian sitar virtuoso _____.

- Ans
- 1. Shahed Parvez
 - 2. Prem Joshua
 - 3. Vilayat Khan
 - 4. Ravi Shankar

Question ID : 264330113243

Option 1 ID : 264330445059

Option 2 ID : 264330445060

Option 3 ID : 264330445057

Option 4 ID : 264330445058

Status : **Answered**

Chosen Option : 4

Q.32 The 97th Constitutional Amendment Act of 2011 has added a new Directive Principle of State Policy related to:

- Ans
- 1. Maternity Leave
 - 2. Child Labour
 - 3. Environment
 - 4. Cooperative Societies

Question ID : 264330114765

Option 1 ID : 264330451146

Option 2 ID : 264330451145

Option 3 ID : 264330451147

Option 4 ID : 264330451148

Status : **Not Attempted and Marked For Review**

Chosen Option : --

Q.33 Which of the following Articles of the Indian Constitution deals with fundamental duties?

- Ans
- 1. Article 41A
 - 2. Article 41
 - 3. Article 51A
 - 4. Article 71

Question ID : 264330113383

Option 1 ID : 264330445618

Option 2 ID : 264330445617

Option 3 ID : 264330445619

Option 4 ID : 264330445620

Status : **Answered**

Chosen Option : 3

Q.34 According to the census of India 2011, identify the state in which 'Total Literacy Rate' and 'Male Literacy Rate' both were more than 90%?

- Ans
- 1. Himachal Pradesh
 - 2. Goa
 - 3. Mizoram
 - 4. Tripura

Question ID : 264330120336

Option 1 ID : 264330471598

Option 2 ID : 264330471596

Option 3 ID : 264330471595

Option 4 ID : 264330471597

Status : **Answered**

Chosen Option : 3

Q.35 Which of the following is the most reactive metal?

- Ans 1. Lead
 2. Magnesium
 3. Zinc
 4. Mercury

Question ID : 264330173654
Option 1 ID : 264330681096
Option 2 ID : 264330681098
Option 3 ID : 264330681097
Option 4 ID : 264330681095
Status : Answered
Chosen Option : 2

Q.36 In which year did India and Maldives sign a trade agreement which provides for export of vital commodities?

- Ans 1. 1981
 2. 2003
 3. 1984
 4. 2001

Question ID : 264330130607
Option 1 ID : 264330511540
Option 2 ID : 264330511542
Option 3 ID : 264330511539
Option 4 ID : 264330511541
Status : Not Answered
Chosen Option : --

Q.37 _____ members of the State Legislative Council are nominated by the Governor of the State.

- Ans 1. 1/6
 2. 1/12
 3. 1/9
 4. 1/15

Question ID : 264330120196
Option 1 ID : 264330471039
Option 2 ID : 264330471040
Option 3 ID : 264330471042
Option 4 ID : 264330471041
Status : Answered
Chosen Option : 1

Q.38 The first edition of the Khelo India University Games was hosted in which of the following years?

- Ans 1. 2019
 2. 2021
 3. 2020
 4. 2018

Question ID : 264330176944
Option 1 ID : 264330693972
Option 2 ID : 264330693974
Option 3 ID : 264330693973
Option 4 ID : 264330693971
Status : Answered
Chosen Option : 2

Q.39 Under the Liberalisation Policy, a lot of industries were reserved for the public sector. Which of the following industries are still reserved under public sector?

- Ans 1. Atomic and Railway Operations
 2. Coal and Mineral Oils
 3. Copper and zinc
 4. Hazardous Chemicals and Alcohol

Question ID : 264330111602
Option 1 ID : 264330438493
Option 2 ID : 264330438495
Option 3 ID : 264330438496
Option 4 ID : 264330438494
Status : Answered
Chosen Option : 1

Q.40 From which country is the power of judicial review taken in the Indian Constitution?

- Ans 1. United Kingdom
 2. United States of America
 3. France
 4. Japan

Question ID : 264330183142
Option 1 ID : 264330718302
Option 2 ID : 264330718303
Option 3 ID : 264330718301
Option 4 ID : 264330718300
Status : Answered
Chosen Option : 2

Q.41 Which of the following is a watershed development scheme of the Ministry of Rural Development of India?

- Ans 1. Hariyali
 2. Digging hand-pump wells
 3. Dam construction
 4. Khushali

Question ID : 264330131820
Option 1 ID : 264330516379
Option 2 ID : 264330516382
Option 3 ID : 264330516381
Option 4 ID : 264330516380
Status : Not Answered
Chosen Option : --

Q.42 On the first Republic Day, 26 January 1950, the Constitution of India replaced which British Act?

- Ans 1. Government of India Act (1919)
 2. Government of India Act (1858)
 3. Government of India Act (1930)
 4. Government of India Act (1935)

Question ID : 264330110458
Option 1 ID : 264330434111
Option 2 ID : 264330434109
Option 3 ID : 264330434112
Option 4 ID : 264330434110
Status : Answered
Chosen Option : 4

Q.43 In which Indian state is the cave site of Bagh located?

- Ans 1. Maharashtra
 2. Odisha
 3. Madhya Pradesh
 4. Uttar Pradesh

Question ID : 264330109632
Option 1 ID : 264330430808
Option 2 ID : 264330430807
Option 3 ID : 264330430806
Option 4 ID : 264330430805
Status : Answered
Chosen Option : 3

Q.44 Surya Sen was associated with which of the following radical activities against British?

- Ans 1. Kakori Conspiracy
 2. Muzaffarpur Conspiracy Case
 3. Delhi Conspiracy Case
 4. Chittagong Armory Raid

Question ID : 264330183103
Option 1 ID : 264330718144
Option 2 ID : 264330718145
Option 3 ID : 264330718147
Option 4 ID : 264330718146
Status : Answered
Chosen Option : 4

Q.45 As per the Indus Water Treaty 1960, how much per cent water can India use from the river?

- Ans 1. 25
 2. 22
 3. 20
 4. 28

Question ID : 264330177104
Option 1 ID : 264330694611
Option 2 ID : 264330694613
Option 3 ID : 264330694612
Option 4 ID : 264330694614
Status : Not Answered
Chosen Option : --

Q.46 Which dynasty ruled after the Tuglaq dynasty?

- Ans 1. Lodi dynasty
 2. Sayyid dynasty
 3. Khalji dynasty
 4. Mamluk dynasty

Question ID : 264330166882
Option 1 ID : 264330654565
Option 2 ID : 264330654563
Option 3 ID : 264330654564
Option 4 ID : 264330654566
Status : Answered
Chosen Option : 2

Q.47 In Olympic archery events, how many concentric rings are there which represent different scoring sectors?

- Ans
- 1. 7
 - 2. 5
 - 3. 2
 - 4. 10

Question ID : 264330113774
Option 1 ID : 264330447183
Option 2 ID : 264330447182
Option 3 ID : 264330447184
Option 4 ID : 264330447181
Status : Answered
Chosen Option : 2

Q.48 Which elements act as hygroscopic nuclei around which water vapour condenses to produce clouds?

- Ans
- 1. Water and dust
 - 2. Salt and water
 - 3. Dust and rock
 - 4. Dust and sea salt

Question ID : 264330118513
Option 1 ID : 264330465455
Option 2 ID : 264330465453
Option 3 ID : 264330465456
Option 4 ID : 264330465454
Status : Not Answered
Chosen Option : --

Q.49 The first electric train ran in which state of India in the year 1925?

- Ans
- 1. Haryana
 - 2. Rajasthan
 - 3. West Bengal
 - 4. Maharashtra

Question ID : 264330181470
Option 1 ID : 264330711805
Option 2 ID : 264330711804
Option 3 ID : 264330711806
Option 4 ID : 264330711803
Status : Answered
Chosen Option : 4

Q.50 Initially, which of the following was the capital of Magadha Mahajanapada?

- Ans
- 1. Rajagaha
 - 2. Vikramshila
 - 3. Pataliputra
 - 4. Vaishali

Question ID : 264330118948
Option 1 ID : 264330466448
Option 2 ID : 264330466449
Option 3 ID : 264330466447
Option 4 ID : 264330466450
Status : Answered
Chosen Option : 3

Q.1 Select the correct combination of mathematical signs that can sequentially replace the * signs and balance the given equation.
 $30*6*5*4*2*27$

Ans 1. ÷, ×, +, −, =

2. +, −, ×, ÷, =

3. +, ×, −, =, ÷

4. +, ×, −, ÷, =

Question ID : 26433079094

Option 1 ID : 264330310381

Option 2 ID : 264330310383

Option 3 ID : 264330310382

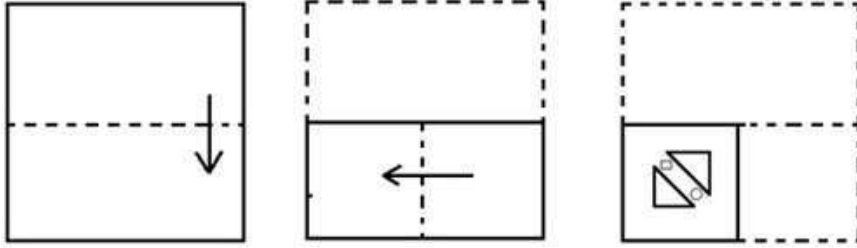
Option 4 ID : 264330310380

Status : Answered

Chosen Option : 1

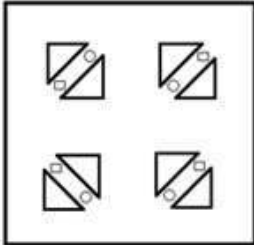


Q.2 The sequence of folding a piece of paper and the manner in which the folded paper has been cut is shown below. Choose a figure which would most closely resemble the unfolded form of the paper.

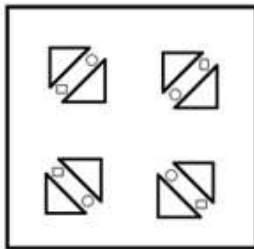


Ans

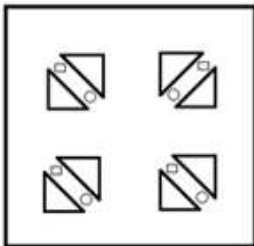
✗ 1.



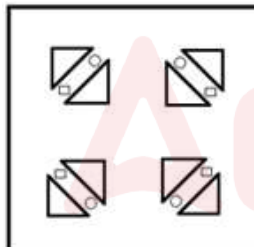
✗ 2.



✗ 3.



✓ 4.



Question ID : 264330112320

Option 1 ID : 264330441366

Option 2 ID : 264330441367

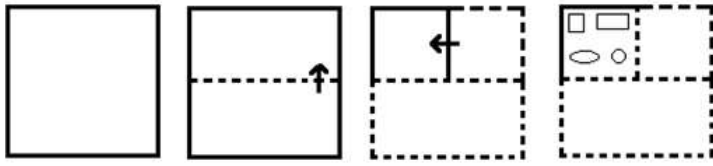
Option 3 ID : 264330441368

Option 4 ID : 264330441365

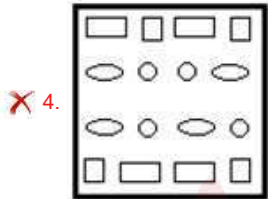
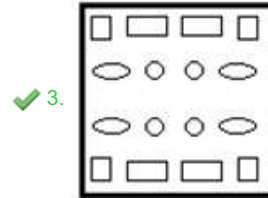
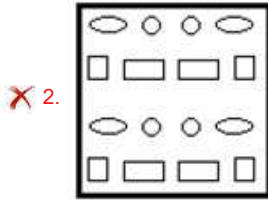
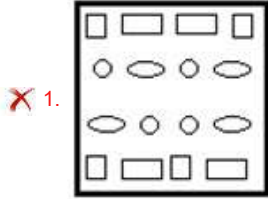
Status : Answered

Chosen Option : 4

Q.3 The sequence of folding a piece of paper and the manner in which the folded paper is cut is shown in the following figures. How would this paper look when unfolded?



Ans



Question ID : 26433074797

Option 1 ID : 264330293278

Option 2 ID : 264330293279

Option 3 ID : 264330293276

Option 4 ID : 264330293277

Status : Answered

Chosen Option : 3

Q.4 Seven people, P, Q, R, S, T, U and V, are sitting in a straight row facing north. Only two people sit to the right of S. Only three people sit between Q and S. R sits to the immediate right of S and to the immediate left of U. T sits to the immediate right of P. P is not a neighbour of Q.

Who sits second from the extreme left end of the row?

- Ans
- 1. Q
 - 2. V
 - 3. R
 - 4. P

Question ID : 26433089502

Option 1 ID : 264330351509

Option 2 ID : 264330351510

Option 3 ID : 264330351512

Option 4 ID : 264330351511

Status : Answered

Chosen Option : 1

Q.5 In a certain code language, 'BASKET' is written as '64' and 'TANKER' is written as '75'. How will 'VACATION' be written in that language?

- Ans
- 1. 93
 - 2. 102
 - 3. 101
 - 4. 90

Question ID : 26433092581

Option 1 ID : 264330363614

Option 2 ID : 264330363616

Option 3 ID : 264330363615

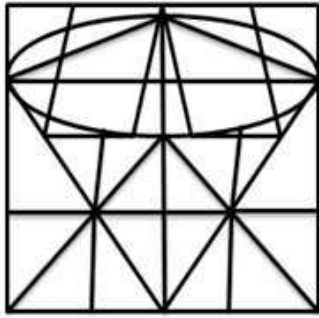
Option 4 ID : 264330363613

Status : Answered

Chosen Option : 1

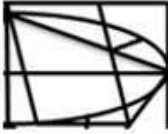
Adda247

Q.6 Select the option figure that is embedded in the given figure. (Rotation is not allowed).



Ans

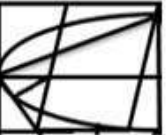
1.



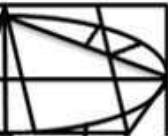
2.



3.



4.



Question ID : 264330114397

Option 1 ID : 264330449673

Option 2 ID : 264330449676

Option 3 ID : 264330449675

Option 4 ID : 264330449674

Status : Answered

Chosen Option : 2

Q.7 Select the set in which the numbers are related in the same way as are the numbers of the following sets.

(NOTE: Operations should be performed on the whole numbers, without breaking down the numbers into its constituent digits. E.g. 13 – Operations on 13 such as adding/deleting/multiplying etc. to 13 can be performed. Breaking down 13 into 1 and 3 and then performing mathematical operations on 1 and 3 is not allowed)

(13, 40, 115)

(5, 16, 43)

Ans 1. (11, 34, 97)

2. (6, 19, 72)

3. (9, 26, 73)

4. (7, 22, 71)

Question ID : 26433052102

Option 1 ID : 264330203712

Option 2 ID : 264330203711

Option 3 ID : 264330203713

Option 4 ID : 264330203710

Status : Answered

Chosen Option : 1

Q.8 Select the number from among the given options that can replace the question mark (?) in the following series.

5, 12, 40, 152, 600, ?

- Ans 1. 3233
 2. 3123
 3. 2392
 4. 4344

Question ID : 264330109762

Option 1 ID : 264330431328

Option 2 ID : 264330431325

Option 3 ID : 264330431326

Option 4 ID : 264330431327

Status : Answered

Chosen Option : 3

Q.9 Which figure should replace the question mark (?) in the following series to continue the pattern?

L	I	C	△	△	C	I	A	
	△		I		A		C	?
K		C	A	L	L	I	▷	△

Ans

1.

C	△
I	▷
A	
2.

△	▷
	I
A	C
3.

△	C
	▷
A	I
4.

A	I
	▷
△	C

Question ID : 264330129625

Option 1 ID : 264330507869

Option 2 ID : 264330507868

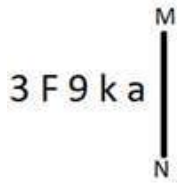
Option 3 ID : 264330507867

Option 4 ID : 264330507866

Status : Not Answered

Chosen Option : --

Q.10 Select the correct mirror image of the given figure when the mirror is placed at MN as shown below.



- Ans
- 1. 3 F 9 k a
 - 2. 9 k 6 7 8
 - 3. 3 F 9 k a
 - 4. a k 9 F 3

Question ID : 264330166656

Option 1 ID : 264330653665

Option 2 ID : 264330653664

Option 3 ID : 264330653666

Option 4 ID : 264330653663

Status : Answered

Chosen Option : 1

Q.11 Two statements are given, followed by two conclusions numbered I and II. Assuming the statements to be true, even if they seem to be at variance with commonly known facts, decide which of the conclusions logically follow(s) from the statements.

Statements:

All crows are birds.

Some crows are pets.

Conclusions:

I. All pets are birds.

II. Some birds are crows.

- Ans
- 1. Only Conclusion II follows.
 - 2. Both Conclusions I and II follow.
 - 3. Only Conclusion I follows.
 - 4. Neither Conclusion I nor II follows.

Question ID : 26433081678

Option 1 ID : 264330320546

Option 2 ID : 264330320547

Option 3 ID : 264330320545

Option 4 ID : 264330320548

Status : Answered

Chosen Option : 1

Q.12 Which of the following option figures will complete the pattern in the figure given below?



Ans

1.



2.



3.



4.



Question ID : 26433080607

Option 1 ID : 264330316363

Option 2 ID : 264330316364

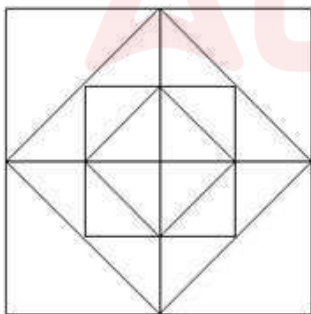
Option 3 ID : 264330316361

Option 4 ID : 264330316362

Status : Answered

Chosen Option : 4

Q.13 How many squares are there in the following figure?



Ans 1. 12

2. 10

3. 14

4. 16

Question ID : 26433076734

Option 1 ID : 264330301001

Option 2 ID : 264330301000

Option 3 ID : 264330301002

Option 4 ID : 264330301003

Status : Answered

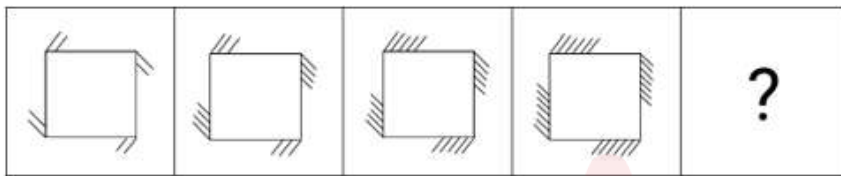
Chosen Option : 1

Q.14 Select the option that is related to the fourth term in the same way as the first term is related to the second term and the fifth term is related to the sixth term.
18 : 27 :: ? : 36 :: 16 : 24

- Ans 1. 24
 2. 23
 3. 32
 4. 42

Question ID : 26433059930
Option 1 ID : 264330234553
Option 2 ID : 264330234555
Option 3 ID : 264330234554
Option 4 ID : 264330234552
Status : Answered
Chosen Option : 1

Q.15 Select the figure from among the given options that can replace the question mark (?) in the following series.



Ans

- 1.
- 2.
- 3.
- 4.

Question ID : 264330110108
Option 1 ID : 264330432711
Option 2 ID : 264330432712
Option 3 ID : 264330432709
Option 4 ID : 264330432710
Status : Answered
Chosen Option : 2

Q.16 Which of the following letter clusters will replace the question mark (?) in the given series to make it logically complete?
HLS, KJP, NHM, QFJ, ?

- Ans
- 1. TDF
 - 2. TDH
 - 3. UDG
 - 4. TDG

Question ID : 264330102222

Option 1 ID : 264330401356

Option 2 ID : 264330401355

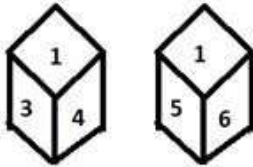
Option 3 ID : 264330401353

Option 4 ID : 264330401354

Status : Answered

Chosen Option : 4

Q.17 Six numbers 1, 2, 3, 4, 5 and 6 are written on different faces of a dice. Two positions of this dice are shown in the figure. Find the number on the face opposite to 5.



- Ans
- 1. 4
 - 2. 6
 - 3. 2
 - 4. 3

Question ID : 264330117894

Option 1 ID : 264330463393

Option 2 ID : 264330463394

Option 3 ID : 264330463391

Option 4 ID : 264330463392

Status : Answered

Chosen Option : 4

Q.18 Select the figure that will replace the question mark (?) in the following figure series.



- Ans
- 1.
 - 2.
 - 3.
 - 4.

Question ID : 264330108958

Option 1 ID : 264330428111

Option 2 ID : 264330428109

Option 3 ID : 264330428112

Option 4 ID : 264330428110

Status : Answered

Chosen Option : 1

Q.19 Select the correct combination of mathematical signs to sequentially replace the * signs and to balance the given equation.
 $32 * 6 * 12 * 67 * 2 = 81$

- Ans
- 1. +, ×, -, +
 - 2. ÷, -, ×, +
 - 3. -, ×, ÷, -
 - 4. ×, ÷, +, -

Question ID : 26433092505
 Option 1 ID : 264330363310
 Option 2 ID : 264330363309
 Option 3 ID : 264330363312
 Option 4 ID : 264330363311
 Status : Answered
 Chosen Option : 3

Q.20 Which of the following option figures will complete the pattern in the figure given below?



Ans

- 1.
- 2.
- 3.
- 4.

Question ID : 26433080640
 Option 1 ID : 264330316494
 Option 2 ID : 264330316495
 Option 3 ID : 264330316496
 Option 4 ID : 264330316493
 Status : Answered
 Chosen Option : 4

Q.21 Which of the following option figures will complete the pattern in the figure given below?



Ans



Question ID : 26433080608
 Option 1 ID : 264330316367
 Option 2 ID : 264330316366
 Option 3 ID : 264330316365
 Option 4 ID : 264330316368

Status : Answered

Chosen Option : 2

Q.22 Select the option that is related to the fifth letter-cluster in the same way as the second letter-cluster is related to the first letter-cluster and the fourth letter-cluster is related to the third letter-cluster.

HEAD : IGDH :: HAND : ICQH :: BACK : ?

Ans 1. DCFO

2. CCEO

3. CDFO

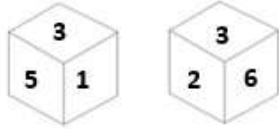
4. CCFO

Question ID : 26433076455
 Option 1 ID : 264330299886
 Option 2 ID : 264330299887
 Option 3 ID : 264330299885
 Option 4 ID : 264330299884

Status : Answered

Chosen Option : 4

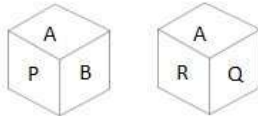
Q.23 Six numbers 3, 2, 5, 1, 7 and 6 are written on different faces of a dice. Two positions of this dice are shown in the figure. Find the number on the face opposite to 5.



- Ans
- 1. 3
 - 2. 6
 - 3. 1
 - 4. 2

Question ID : 264330129790
Option 1 ID : 264330508391
Option 2 ID : 264330508393
Option 3 ID : 264330508392
Option 4 ID : 264330508394
Status : Answered
Chosen Option : 4

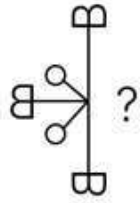
Q.24 Six letters A, B, C, P, Q and R are written on different faces of a dice. Two positions of this dice are shown in the figure. Find the letter on the face opposite to Q.



- Ans
- 1. C
 - 2. R
 - 3. P
 - 4. B

Question ID : 264330109202
Option 1 ID : 264330429085
Option 2 ID : 264330429086
Option 3 ID : 264330429088
Option 4 ID : 264330429087
Status : Answered
Chosen Option : 4

Q.25 Select the figure from the given options that will replace the question mark (?) in the figure given below to complete the pattern so that the final image is symmetrical.



- Ans
- 1.
 - 2.
 - 3.
 - 4.

Question ID : 264330114729
Option 1 ID : 264330451003
Option 2 ID : 264330451004
Option 3 ID : 264330451002
Option 4 ID : 264330451001
Status : Answered
Chosen Option : 2

Section : Numerical Ability

Q.1 The product of two numbers is 8427. If the HCF of these numbers is 53, then find the greater number.

- Ans
- 1. 159
 - 2. 189
 - 3. 109
 - 4. 119

Question ID : 264330112793
Option 1 ID : 264330443257
Option 2 ID : 264330443258
Option 3 ID : 264330443259
Option 4 ID : 264330443260
Status : Answered
Chosen Option : 1

Q.2 Three successive discounts of 15%, 10% and 8% are equivalent to a single discount of k%. Find the value of k.

- Ans
- 1. 27.62%
 - 2. 28.62%
 - 3. 29.62%
 - 4. 30.62%

Question ID : 264330183820
Option 1 ID : 264330720956
Option 2 ID : 264330720957
Option 3 ID : 264330720958
Option 4 ID : 264330720959
Status : Answered
Chosen Option : 1

Q.3 A cloth merchant sold half of his clothes at 30% profit, half of the remaining clothes at 20% loss, and the rest was sold at his cost price. In the total transaction, what is his gain or loss percentage?

- Ans
- 1. Profit 12%
 - 2. Profit 10%
 - 3. Loss 10%
 - 4. Loss 12%

Question ID : 264330118420

Option 1 ID : 264330465083

Option 2 ID : 264330465081

Option 3 ID : 264330465082

Option 4 ID : 264330465084

Status : Answered

Chosen Option : 2

Q.4 The monthly income of a person is ₹45,000. If his income is increased by 25%, then find his new monthly income (in ₹).

- Ans
- 1. 55,500
 - 2. 58,250
 - 3. 56,250
 - 4. 11,250

Question ID : 264330103464

Option 1 ID : 264330406161

Option 2 ID : 264330406162

Option 3 ID : 264330406164

Option 4 ID : 264330406163

Status : Answered

Chosen Option : 1

Q.5 Area of the first triangle is 420 cm^2 and its base is 60 cm, whereas, area of the second triangle is 1500 cm^2 and its base is 7.5 cm. What will be the ratio of the height of the first triangle to that of the second triangle?

- Ans
- 1. 6 : 325
 - 2. 7 : 200
 - 3. 7 : 250
 - 4. 5 : 242

Question ID : 264330131357

Option 1 ID : 264330514540

Option 2 ID : 264330514541

Option 3 ID : 264330514542

Option 4 ID : 264330514539

Status : Not Answered

Chosen Option : --

Q.6

The value of $\frac{0.0203 \times 2.92}{0.7 \times 0.0365 \times 2.9}$ is:

- Ans
- 1. 0.8
 - 2. 0.3
 - 3. 0.7
 - 4. 0.5

Question ID : 264330103651
Option 1 ID : 264330406910
Option 2 ID : 264330406912
Option 3 ID : 264330406911
Option 4 ID : 264330406909
Status : Answered
Chosen Option : 1

Q.7

For what value of n are $3^n - 2^n$ and $3^n + 2^n$ prime?

- Ans
- 1. 4
 - 2. 2
 - 3. 5
 - 4. 3

Question ID : 264330104276
Option 1 ID : 264330409407
Option 2 ID : 264330409405
Option 3 ID : 264330409408
Option 4 ID : 264330409406
Status : Answered
Chosen Option : 2

Q.8 The average of 10 terms is 50 and the average of the first 5 terms is 45. What is the average of the remaining 5 terms?

- Ans
- 1. 55
 - 2. 40
 - 3. 45
 - 4. 50

Question ID : 264330129919
Option 1 ID : 264330508910
Option 2 ID : 264330508909
Option 3 ID : 264330508908
Option 4 ID : 264330508907
Status : Answered
Chosen Option : 1

Q.9 A person takes a loan of ₹4,000 for 3 years at 8% per annum compound interest. He repaid ₹2,000 in each of the first and second years. The amount he should pay at the end of the third year to clear all his debt is:

- Ans
- 1. ₹500.20
 - 2. ₹567.12
 - 3. ₹546.05
 - 4. ₹525.34

Question ID : 264330103736
Option 1 ID : 264330407249
Option 2 ID : 264330407252
Option 3 ID : 264330407251
Option 4 ID : 264330407250
Status : Not Answered
Chosen Option : --

Q.10 A man decides to travel 90 kilometres in 9 hours, partly by foot and partly on a bicycle. If his speed on foot is 9 kilometres/hour and bicycle is 18 kilometres/hour, what is the distance he travels on foot?

- Ans
- 1. 72 kilometres
 - 2. 85 kilometres
 - 3. 100 kilometres
 - 4. 68 kilometres

Question ID : 264330104363
Option 1 ID : 264330409754
Option 2 ID : 264330409755
Option 3 ID : 264330409756
Option 4 ID : 264330409753
Status : Answered
Chosen Option : 1

Q.11 A solid metallic hemisphere of radius 9 cm is melted and recast into a right circular cone of height 72 cm. The radius of the base of the cone is:

- Ans
- 1. $5\frac{1}{2}$ cm
 - 2. $8\frac{1}{2}$ cm
 - 3. $3\frac{1}{2}$ cm
 - 4. $4\frac{1}{2}$ cm

Question ID : 264330119369
Option 1 ID : 264330467766
Option 2 ID : 264330467765
Option 3 ID : 264330467763
Option 4 ID : 264330467764
Status : Not Answered
Chosen Option : --

Q.12 Bhumika deposited ₹8,000, which amounted to ₹9,200 after 3 years at $r\%$ p.a. simple interest. Had the interest rate been 2% more, that is, $(r + 2)\%$ per annum, what amount would she have received?

- Ans 1. ₹9,680
 2. ₹9,890
 3. ₹9,700
 4. ₹9,600

Question ID : 264330182530
Option 1 ID : 264330715912
Option 2 ID : 264330715914
Option 3 ID : 264330715911
Option 4 ID : 264330715913
Status : Answered
Chosen Option : 1

Q.13 The monthly incomes of A and B are in the ratio of 3 : 4, and their monthly expenditures are in the ratio 2 : 3. If each saves ₹6,000 per month, then find the monthly income of the B.

- Ans 1. ₹22,000
 2. ₹23,000
 3. ₹25,000
 4. ₹24,000

Question ID : 264330105996
Option 1 ID : 264330416285
Option 2 ID : 264330416286
Option 3 ID : 264330416288
Option 4 ID : 264330416287
Status : Answered
Chosen Option : 4

Q.14 Radha and Shama undertake a piece of work for ₹36,000. Radha can do it in 20 days and Shama can do it in 60 days. With the help of Rama, they finished it in 10 days. How much should Rama be paid for her contribution?

- Ans 1. ₹15,000
 2. ₹20,000
 3. ₹12,000
 4. ₹8,000

Question ID : 264330104223
Option 1 ID : 264330409193
Option 2 ID : 264330409194
Option 3 ID : 264330409196
Option 4 ID : 264330409195
Status : Answered
Chosen Option : 3

Q.15 A man increases his consumption of sugar by 44.44% because the price of sugar is reduced by P%. Find P. (Expenditure remains constant.)

Ans

✓ 1. $30\frac{10}{13}\%$

✗ 2. $32\frac{10}{13}\%$

✗ 3. $20\frac{10}{13}\%$

✗ 4. $25\frac{10}{13}\%$

Question ID : 264330129397

Option 1 ID : 264330506956

Option 2 ID : 264330506957

Option 3 ID : 264330506954

Option 4 ID : 264330506955

Status : Answered

Chosen Option : 1

Section : Computer Proficiency

Q.1 Which of the following is a shortcut key to open the Font dialog box in MS Word 365?

Ans ✓ 1. Ctrl+Shift+F

✗ 2. Ctrl+Alt+F

✗ 3. Alt+F

✗ 4. Ctrl+F

Question ID : 264330178602

Option 1 ID : 264330700435

Option 2 ID : 264330700436

Option 3 ID : 264330700438

Option 4 ID : 264330700437

Status : Answered

Chosen Option : 3

Q.2 Which organisation oversees the development and standardisation of technologies for the World Wide Web?

Ans ✗ 1. IEEE

✗ 2. IEIT

✗ 3. WHO

✓ 4. W3C

Question ID : 264330182113

Option 1 ID : 264330714291

Option 2 ID : 264330714292

Option 3 ID : 264330714294

Option 4 ID : 264330714293

Status : Answered

Chosen Option : 4

Q.3 What is the default page orientation in Microsoft Word 365?

- Ans 1. Portrait
 2. Square
 3. Pentagon
 4. Landscape

Question ID : 264330180714
Option 1 ID : 264330708824
Option 2 ID : 264330708825
Option 3 ID : 264330708826
Option 4 ID : 264330708823
Status : Answered
Chosen Option : 1

Q.4 In MS Excel 365, the default row height and the column width, respectively, are:

- Ans 1. 10 and 8.52
 2. 20 and 10.51
 3. 5 and 10.43
 4. 15 and 8.43

Question ID : 264330175960
Option 1 ID : 264330690135
Option 2 ID : 264330690136
Option 3 ID : 264330690138
Option 4 ID : 264330690137
Status : Not Answered
Chosen Option : --

Q.5 Under which of the following tabs of the MS Word 365 ribbon are the Bullets and Numbering options present?

- Ans 1. Insert
 2. Mailings
 3. Home
 4. File

Question ID : 264330180832
Option 1 ID : 264330709293
Option 2 ID : 264330709292
Option 3 ID : 264330709291
Option 4 ID : 264330709294
Status : Answered
Chosen Option : 1

Q.6 In MS Excel 365, A Contour map is an example of which of the following charts?

- Ans 1. Surface Chart
 2. Scatter chart
 3. Radar chart
 4. Doughnut chart

Question ID : 264330175954
Option 1 ID : 264330690112
Option 2 ID : 264330690111
Option 3 ID : 264330690113
Option 4 ID : 264330690114
Status : Answered
Chosen Option : 3

Q.7 Which of the following features can you use if you are having problems or want to find out how to do something in MS Word 365?

- Ans
- 1. Review
 - 2. Insert
 - 3. Help
 - 4. Edit

Question ID : 264330178604
Option 1 ID : 264330700446
Option 2 ID : 264330700445
Option 3 ID : 264330700444
Option 4 ID : 264330700443
Status : Answered
Chosen Option : 3

Q.8 Which of the following shortcut keys is used in MS Word 365 to move by one preview page when zoomed out?

- Ans
- 1. Ctrl+Alt+I
 - 2. Page UP or Page Down
 - 3. Ctrl+P
 - 4. Ctrl+D

Question ID : 264330178600
Option 1 ID : 264330700427
Option 2 ID : 264330700429
Option 3 ID : 264330700428
Option 4 ID : 264330700430
Status : Answered
Chosen Option : 2

Q.9 In Microsoft Excel 365, what is a function?

- Ans
- 1. A method to create animations in spreadsheets
 - 2. A design tool for creating charts and graphs
 - 3. A predefined formula that performs calculations using values in a specific order
 - 4. A text formatting option for cells

Question ID : 264330180688
Option 1 ID : 264330708722
Option 2 ID : 264330708720
Option 3 ID : 264330708719
Option 4 ID : 264330708721
Status : Answered
Chosen Option : 3

Q.10 Files or documents that are included with the email are commonly referred to as

- Ans
- 1. add-ons
 - 2. appends
 - 3. attachments
 - 4. supplements

Question ID : 264330173546

Option 1 ID : 264330680663

Option 2 ID : 264330680666

Option 3 ID : 264330680665

Option 4 ID : 264330680664

Status : Answered

Chosen Option : 3



Constable Executive Male and Female in Delhi Police Examination 2023

Roll Number	
Candidate Name	
Venue Name	iON Digital Zone iDZ Harahuwa Chauraha
Exam Date	02/12/2023
Exam Time	3:00 PM - 4:30 PM
Subject	Constable Executive Male and Female in Delhi Police Examination 2023

Section : General Knowledge

Q.1 When did Italian traveller Marco Polo visit Kerala?

- Ans
- 1. 15th CE
 - 2. 8th CE
 - 3. 10th CE
 - 4. 13th CE

Question ID : 264330119732
Option 1 ID : 264330469206
Option 2 ID : 264330469205
Option 3 ID : 264330469203
Option 4 ID : 264330469204
Status : Answered
Chosen Option : 4

Q.2 The Bombay Presidency Association was started by Badruddin Tyabji, Pherozshah Mehta and KT Telang in which of the following years?

- Ans
- 1. 1887
 - 2. 1885
 - 3. 1886
 - 4. 1888

Question ID : 264330171704
Option 1 ID : 264330673421
Option 2 ID : 264330673419
Option 3 ID : 264330673420
Option 4 ID : 264330673422
Status : Answered
Chosen Option : 2

Q.3 Mahatma Gandhi started the Dandi March in 1930 from _____.

- Ans
- 1. Yerawada Ashram
 - 2. Dandi Ashram
 - 3. Surat Ashram
 - 4. Sabarmati Ashram

Question ID : 264330114104
Option 1 ID : 264330448501
Option 2 ID : 264330448504
Option 3 ID : 264330448503
Option 4 ID : 264330448502
Status : Answered
Chosen Option : 4

Q.4 The famous Hindi novel 'Gaban' is written by:

- Ans
- 1. Dharmveer Bharati
 - 2. Amrita Pritam
 - 3. Munshi Premchand
 - 4. Mahadevi Verma

Question ID : 26433064629
Option 1 ID : 264330253109
Option 2 ID : 264330253108
Option 3 ID : 264330253110
Option 4 ID : 264330253111
Status : Answered
Chosen Option : 3

Q.5 In which of the following states is the famous Rumtek monastery located?

- Ans
- 1. Uttarakhand
 - 2. Assam
 - 3. Sikkim
 - 4. West Bengal

Question ID : 264330106246
Option 1 ID : 264330417288
Option 2 ID : 264330417285
Option 3 ID : 264330417286
Option 4 ID : 264330417287
Status : Answered
Chosen Option : 3

Q.6 Monolithic pillars of sandstone during Ashoka's reign, were crowned with animal figures like _____ elephant and lion along with inscriptions of Buddhist concepts.

- Ans
- 1. bull
 - 2. dog
 - 3. horse
 - 4. cat

Question ID : 264330106355
Option 1 ID : 264330417722
Option 2 ID : 264330417721
Option 3 ID : 264330417723
Option 4 ID : 264330417724
Status : Answered
Chosen Option : 1

Q.7 In which of the following years did India start celebrating National Sports Day?

- Ans
- 1. 2015
 - 2. 2010
 - 3. 2013
 - 4. 2012

Question ID : 264330118455
Option 1 ID : 264330465224
Option 2 ID : 264330465223
Option 3 ID : 264330465222
Option 4 ID : 264330465221
Status : Answered
Chosen Option : 1

Q.8 Padma Vibhushan awardee Kathak dancer and choreographer, Birju Maharaj belonged to which of the following Gharanas?

- Ans
- 1. Jaipur
 - 2. Kalka - Bindadin
 - 3. Gwalior
 - 4. Benaras

Question ID : 264330112879
Option 1 ID : 264330443601
Option 2 ID : 264330443603
Option 3 ID : 264330443604
Option 4 ID : 264330443602
Status : Answered
Chosen Option : 2

Q.9 Identify the correct statement in the context of five-year plans in India.
(i) In the first five-year plan, the top priority was given to agriculture.
(ii) In the second five-year plan, the top priority was given to industry.

- Ans
- 1. Only (ii)
 - 2. Both (i) and (ii)
 - 3. Only (i)
 - 4. Neither (i) nor (ii)

Question ID : 264330109099
Option 1 ID : 264330428674
Option 2 ID : 264330428675
Option 3 ID : 264330428673
Option 4 ID : 264330428676
Status : Answered
Chosen Option : 2

Q.10 पारिस्थितिक अनुक्रम के बारे में निम्नलिखित में से कौन-सा/से कथन सत्य है/हैं?
कथन 1: यह किसी दिए गए क्षेत्र के जाति-संघटन में क्रमिक और स्पष्ट पूर्वानुमेय परिवर्तन है।
कथन 2: यह पारिस्थितिकी संरक्षण की विधि है।

- Ans
- 1. केवल कथन 1 सत्य है
 - 2. केवल कथन 2 सत्य है
 - 3. कथन 1 और 2 दोनों असत्य हैं
 - 4. कथन 1 और 2 दोनों सत्य हैं

Question ID : 264330138005
Option 1 ID : 264330540627
Option 2 ID : 264330540628
Option 3 ID : 264330540629
Option 4 ID : 264330540630
Status : Answered
Chosen Option : 4

Q.11 The Constitution of India provides for a _____ integrated judicial system.

- Ans 1. single-level
 2. multi-level
 3. dual-level
 4. three-level

Question ID : 264330169056
Option 1 ID : 264330663028
Option 2 ID : 264330663030
Option 3 ID : 264330663027
Option 4 ID : 264330663029
Status : Answered
Chosen Option : 4

Q.12 In which state is the Gandhi Sagar Wildlife Sanctuary located?

- Ans 1. Nagaland
 2. Assam
 3. Madhya Pradesh
 4. Karnataka

Question ID : 264330173630
Option 1 ID : 264330681002
Option 2 ID : 264330681001
Option 3 ID : 264330680999
Option 4 ID : 264330681000
Status : Answered
Chosen Option : 3

Q.13 Ngozi Okonjo-Iweala is currently heading which of the following institutions?

- Ans 1. IMF
 2. Asian Development Bank
 3. WTO
 4. World Bank

Question ID : 26433059301
Option 1 ID : 264330232080
Option 2 ID : 264330232083
Option 3 ID : 264330232081
Option 4 ID : 264330232082
Status : Answered
Chosen Option : 2

Q.14 National Sports University is situated in _____.

- Ans 1. Imphal
 2. Itanagar
 3. New Delhi
 4. Chennai

Question ID : 264330110375
Option 1 ID : 264330433779
Option 2 ID : 264330433780
Option 3 ID : 264330433777
Option 4 ID : 264330433778
Status : Not Answered
Chosen Option : --

Q.15 In which of the following years was the National Human Rights Commission formed?

- Ans 1. 1965
 2. 1980
 3. 2000
 4. 1993

Question ID : 26433086824
Option 1 ID : 264330340940
Option 2 ID : 264330340939
Option 3 ID : 264330340937
Option 4 ID : 264330340938
Status : Not Answered
Chosen Option : --

Q.16 Which of the following Articles lays down the duty of the State to raise the level of nutrition and the standard of living and to improve public health?

- Ans 1. Article 44
 2. Article 46
 3. Article 45
 4. Article 47

Question ID : 264330120100
Option 1 ID : 264330470655
Option 2 ID : 264330470657
Option 3 ID : 264330470656
Option 4 ID : 264330470658
Status : Answered
Chosen Option : 3

Q.17 Chandrayaan-3 leaves Earth's surface by burning a huge amount of fuel. The gases released then push the rocket upwards against gravity. Which law of motion is applied here?

- Ans 1. Newton's 1st law of motion
 2. Newton's law of gravitation
 3. Newton's 3rd law of motion
 4. Newton's 2nd law of motion

Question ID : 264330177011
Option 1 ID : 264330694242
Option 2 ID : 264330694241
Option 3 ID : 264330694240
Option 4 ID : 264330694239
Status : Answered
Chosen Option : 3

Q.18 At which of the following places did Gandhiji conduct his first experiment of Satyagraha in India?

- Ans** 1. Champaran
 2. Calcutta
 3. Cawnpore
 4. Ahmedabad

Question ID : 264330113589
Option 1 ID : 264330446443
Option 2 ID : 264330446441
Option 3 ID : 264330446442
Option 4 ID : 264330446444
Status : Answered
Chosen Option : 1

Q.19 Which of the following statements about Fundamental Duties is correct?.

- I) Sardar Swaran Singh recommended the inclusion of a chapter on fundamental duties in the Constitution of India.
II) Promotion of cooperative societies is a fundamental duty.

- Ans** 1. Only 2
 2. Both 1 and 2
 3. Only 1
 4. Neither 1 nor 2

Question ID : 264330110109
Option 1 ID : 264330432714
Option 2 ID : 264330432715
Option 3 ID : 264330432713
Option 4 ID : 264330432716
Status : Answered
Chosen Option : 3

Q.20 The Multidimensional Poverty Index of India does NOT consider which of the following for calculating the index?

- Ans** 1. Environmental quality
 2. Health
 3. Education
 4. Standard of Living

Question ID : 264330120347
Option 1 ID : 264330471642
Option 2 ID : 264330471639
Option 3 ID : 264330471640
Option 4 ID : 264330471641
Status : Answered
Chosen Option : 1

Q.21 Which of the following organisations was founded by Vinayak Damodar Savarkar in 1904?

- Ans
- 1. Free India Society
 - 2. Jugantar
 - 3. Indian Independence League
 - 4. Abhinav Bharat Society

Question ID : 264330120263
Option 1 ID : 264330471308
Option 2 ID : 264330471309
Option 3 ID : 264330471310
Option 4 ID : 264330471307
Status : Answered
Chosen Option : 4

Q.22 स्वतंत्रता के बाद पहले राष्ट्रीय खेलों का आयोजन _____ में किया गया था।

- Ans
- 1. जबलपुर
 - 2. मद्रास
 - 3. लखनऊ
 - 4. नई दिल्ली

Question ID : 264330132532
Option 1 ID : 264330519225
Option 2 ID : 264330519224
Option 3 ID : 264330519223
Option 4 ID : 264330519226
Status : Answered
Chosen Option : 4

Q.23 Which of the following is an example of a joint sector industry?

- Ans
- 1. Hindustan Aeronautics Limited
 - 2. National Highway Authority of India
 - 3. Steel Authority of India Limited
 - 4. Oil India Limited

Question ID : 264330173607
Option 1 ID : 264330680907
Option 2 ID : 264330680908
Option 3 ID : 264330680909
Option 4 ID : 264330680910
Status : Answered
Chosen Option : 3

Q.24 Lalitha and Saroja Chidambaram are the noted _____ singers.

- Ans
- 1. folk
 - 2. Sufi
 - 3. Hindustani classical
 - 4. Carnatic

Question ID : 264330110246
Option 1 ID : 264330433263
Option 2 ID : 264330433261
Option 3 ID : 264330433262
Option 4 ID : 264330433264
Status : Answered
Chosen Option : 4

Q.25 Vijayanagar Emperor Achyuta Deva Raya belonged to the _____ dynasty.

- Ans
- 1. Sangama
 - 2. Saluva
 - 3. Tuluva
 - 4. Aravidu

Question ID : 264330106566
Option 1 ID : 264330418568
Option 2 ID : 264330418565
Option 3 ID : 264330418567
Option 4 ID : 264330418566
Status : Answered
Chosen Option : 3

Q.26 निम्नलिखित में से वह कौन-सी मोहिनीअट्टम नृत्यांगना हैं जिन्होंने 'मोहिनीअट्टम: चरित्रवम आट्टापराकरवम' पुस्तक लिखी है, और जिनको 1997 में प्रतिष्ठित कालिदास सम्मान प्राप्त हुआ?

- Ans
- 1. कलामंडलम कल्याणिकुट्टी अम्मा
 - 2. रुक्मिणी देवी अरुंडेल
 - 3. यामिनी कृष्णमूर्ति
 - 4. शोभना नारायण

Question ID : 264330112880
Option 1 ID : 264330443607
Option 2 ID : 264330443608
Option 3 ID : 264330443606
Option 4 ID : 264330443605
Status : Answered
Chosen Option : 1

Q.27 Patanjali is well known for the compilation of:

- Ans
- 1. Ayurveda
 - 2. Yoga Sutra
 - 3. Bramhasutra
 - 4. Panchatantra

Question ID : 264330123734
Option 1 ID : 264330484974
Option 2 ID : 264330484971
Option 3 ID : 264330484973
Option 4 ID : 264330484972
Status : Answered
Chosen Option : 1

Q.28 _____ is the largest slum in Asia.

- Ans
- 1. Dharavi
 - 2. Kathputli
 - 3. Baiganwadi
 - 4. Banganga

Question ID : 26433092857
Option 1 ID : 264330364712
Option 2 ID : 264330364709
Option 3 ID : 264330364710
Option 4 ID : 264330364711
Status : Answered
Chosen Option : 1

Q.29 निम्नलिखित में से कौन-सा एक एन.बी.एफ.सी.-एम.एफ.आई. (NBFC-MFI) है, जो ग्रामीण के संयुक्त देयता समूह उधार मॉडल में काम करता है?

- Ans
- 1. आरोहण फाइनेंशियल सर्विसेज लिमिटेड
 - 2. फ्यूजन माइक्रोफाइनेंस प्राइवेट लिमिटेड
 - 3. इक्विटास स्मॉल फाइनेंस बैंक
 - 4. बंधन फाइनेंशियल सर्विसेज प्राइवेट लिमिटेड

Question ID : 264330116496
Option 1 ID : 264330458071
Option 2 ID : 264330458072
Option 3 ID : 264330458070
Option 4 ID : 264330458069
Status : Marked For Review
Chosen Option : 4

Q.30 Who among the following used the term Evergreen Revolution for increasing agricultural production in India?

- Ans
- 1. Raj Krishna
 - 2. RKV Rao
 - 3. MS Swaminathan
 - 4. Norman Borlaug

Question ID : 264330110001
Option 1 ID : 264330432283
Option 2 ID : 264330432284
Option 3 ID : 264330432282
Option 4 ID : 264330432281
Status : Answered
Chosen Option : 3

Q.31 Cell nucleus was discovered by _____.

- Ans
- 1. Robert Brown
 - 2. Matthias Schleiden
 - 3. Rudolf Virchow
 - 4. Robert Hook

Question ID : 264330117605
Option 1 ID : 264330462445
Option 2 ID : 264330462448
Option 3 ID : 264330462447
Option 4 ID : 264330462446
Status : Answered
Chosen Option : 4

Q.32 Where is the headquarters of the National Rifle Association of India situated?

- Ans
- 1. New Delhi
 - 2. Bengaluru
 - 3. Kolkata
 - 4. Mumbai

Question ID : 264330118457
Option 1 ID : 264330465231
Option 2 ID : 264330465230
Option 3 ID : 264330465229
Option 4 ID : 264330465232
Status : Not Answered
Chosen Option : --

Q.33 Baliyatra is the cultural festival of which Indian state?

- Ans 1. Kerala
 2. Odisha
 3. Jharkhand
 4. West Bengal

Question ID : 264330109610
Option 1 ID : 264330430718
Option 2 ID : 264330430717
Option 3 ID : 264330430719
Option 4 ID : 264330430720
Status : Answered
Chosen Option : 2

Q.34 Which of the following ministries is the implementing ministry for 'PM CARES for Children Scheme'?

- Ans 1. Ministry of Social Justice and Empowerment
 2. Ministry of Health and Family Welfare
 3. Ministry of Home Affairs
 4. Ministry of Women and Child Development

Question ID : 264330111588
Option 1 ID : 264330438439
Option 2 ID : 264330438437
Option 3 ID : 264330438440
Option 4 ID : 264330438438
Status : Answered
Chosen Option : 4

Q.35 Who was the author of 'The Great Indian Novel'?

- Ans 1. Anees Salim
 2. Anuj Dhar
 3. Salim Khan
 4. Shashi Tharoor

Question ID : 26433064226
Option 1 ID : 264330251496
Option 2 ID : 264330251499
Option 3 ID : 264330251498
Option 4 ID : 264330251497
Status : Answered
Chosen Option : 4

Q.36 Which cargo port in India has the biggest capacity from the followings?

- Ans 1. Marmagao Port
 2. Jawaharlal Nehru Port
 3. Tuticorin Port
 4. New Mangalore Port

Question ID : 264330182954
Option 1 ID : 264330717548
Option 2 ID : 264330717550
Option 3 ID : 264330717551
Option 4 ID : 264330717549
Status : Answered
Chosen Option : 2

Q.37 Part IV-A of the Constitution of India contains _____ Articles.

- Ans
- 1. four
 - 2. three
 - 3. one
 - 4. two

Question ID : 264330130437
Option 1 ID : 264330510862
Option 2 ID : 264330510861
Option 3 ID : 264330510859
Option 4 ID : 264330510860
Status : Answered
Chosen Option : 3

Q.38 Phytoplanktons are _____.

- Ans
- 1. primary consumers of lake ecosystem
 - 2. tertiary consumers of pond ecosystem
 - 3. producers in pond ecosystem
 - 4. secondary consumers of ocean ecosystem

Question ID : 264330111898
Option 1 ID : 264330439678
Option 2 ID : 264330439680
Option 3 ID : 264330439677
Option 4 ID : 264330439679
Status : Answered
Chosen Option : 3

Q.39 Who among the following was the founder of Raigarh gharana of Kathak?

- Ans
- 1. Raja Chakradhar Singh
 - 2. Shambhu Maharaj
 - 3. Ishwari Prasad
 - 4. Janaki Prasad

Question ID : 26433086937
Option 1 ID : 264330341390
Option 2 ID : 264330341392
Option 3 ID : 264330341389
Option 4 ID : 264330341391
Status : Answered
Chosen Option : 2

Q.40 The Strait of Gibraltar connects which of the following Ocean with the Mediterranean Sea and separates Spain on the European continent from Morocco on the African continent?

- Ans
- 1. Indian Ocean
 - 2. Pacific Ocean
 - 3. Southern Ocean
 - 4. Atlantic Ocean

Question ID : 264330131029
Option 1 ID : 264330513229
Option 2 ID : 264330513227
Option 3 ID : 264330513230
Option 4 ID : 264330513228
Status : Answered
Chosen Option : 2

Q.41 Rajya Sabha enjoys which special power under Article 312 of the Constitution of India?

- Ans**
- 1. To put restriction on Government
 - 2. To appoint members of Human Rights Commission
 - 3. To create new All India service
 - 4. To extend special rights to certain people

Question ID : 264330130484
Option 1 ID : 264330511049
Option 2 ID : 264330511050
Option 3 ID : 264330511047
Option 4 ID : 264330511048
Status : Answered
Chosen Option : 2

Q.42 Which of the following is the outcome of globalisation of a country's economy?

- Ans**
- 1. Outsourcing
 - 2. Monetary policy reforms
 - 3. Dis-investment
 - 4. Fiscal policy reforms

Question ID : 264330111571
Option 1 ID : 264330438369
Option 2 ID : 264330438371
Option 3 ID : 264330438372
Option 4 ID : 264330438370
Status : Answered
Chosen Option : 3

Q.43 Music composer Debojyoti Mishra has won the Best Music Director award at the 20th Imagine India Film Festival in _____ for his work in film 'Bansuri: The Flute'.

- Ans**
- 1. Spain
 - 2. France
 - 3. Germany
 - 4. Italy

Question ID : 264330110251
Option 1 ID : 264330433283
Option 2 ID : 264330433281
Option 3 ID : 264330433282
Option 4 ID : 264330433284
Status : Not Answered
Chosen Option : --

Q.44 नीचे दिए गए कथनों पर विचार कीजिए और भारतीय लोक और जनजातीय नृत्य शैलियों के संबंध में सही विकल्प का चयन कीजिए।
i) चैलम (Chailam), मिजोरम का लोक नृत्य है।
ii) होजागिरी, गुजरात का लोक नृत्य है।
iii) बिदेसिया, बिहार का लोक नृत्य है।

- Ans
- 1. केवल (ii) सही है।
 - 2. (i) और (iii), दोनों सही हैं।
 - 3. (ii) और (iii), दोनों सही हैं।
 - 4. केवल (i) सही है।

Question ID : 264330181382
Option 1 ID : 264330711453
Option 2 ID : 264330711452
Option 3 ID : 264330711454
Option 4 ID : 264330711451
Status : Answered
Chosen Option : 4

Q.45 If NDP at factor cost = ₹1,050 crore
Subsidies = ₹40 crore
Net factor income from abroad = ₹10 crore
How much is NNP at factor cost?

- Ans
- 1. ₹1,060 crore
 - 2. ₹1,100 crore
 - 3. ₹1,090 crore
 - 4. ₹1,040 crore

Question ID : 264330112892
Option 1 ID : 264330443654
Option 2 ID : 264330443656
Option 3 ID : 264330443655
Option 4 ID : 264330443653
Status : Answered
Chosen Option : 2

Q.46 In which of the following Articles of the Constitution of India is it mentioned that "it shall be the duty of every citizen of India to abide by the Constitution and respect its ideals and institutions, the National Flag and the National Anthem"?

- Ans
- 1. 51A (f)
 - 2. 51A (a)
 - 3. 51A (k)
 - 4. 51A (j)

Question ID : 264330133061
Option 1 ID : 264330521295
Option 2 ID : 264330521298
Option 3 ID : 264330521297
Option 4 ID : 264330521296
Status : Answered
Chosen Option : 2

Q.47 Showcasing its wildlife and religious sites at the 74th parade, which of the following states' tableau won 1st prize at the 2023 Republic Day?

- Ans
- 1. Jharkhand
 - 2. Uttarakhand
 - 3. Gujarat
 - 4. Arunachal Pradesh

Question ID : 264330134253
Option 1 ID : 264330526009
Option 2 ID : 264330526008
Option 3 ID : 264330526010
Option 4 ID : 264330526007
Status : Answered
Chosen Option : 2

Q.48 चंद्रगुप्त मौर्य द्वारा प्राचीन भारत में मौर्य साम्राज्य की स्थापना के ठीक पहले निम्नलिखित में से किस राजवंश ने मगध पर शासन किया था?

- Ans
- 1. बृहद्रथ
 - 2. प्रद्योत
 - 3. शिशुनाग
 - 4. नंद

Question ID : 264330120238
Option 1 ID : 264330471207
Option 2 ID : 264330471209
Option 3 ID : 264330471208
Option 4 ID : 264330471210
Status : Answered
Chosen Option : 4

Q.49 Match the columns with respect to the ranking of the given countries on the Human Development Index 2021/2022 out of 191 countries.

Country	Rank
1. China	a. 161
2. Nepal	b. 143
3. Pakistan	c. 79

- Ans
- 1. 1-c, 2-b, 3-a
 - 2. 1-a, 2-c, 3-b
 - 3. 1-a, 2-b, 3-c
 - 4. 1-c, 2-a, 3-b

Question ID : 264330132763
Option 1 ID : 264330520147
Option 2 ID : 264330520150
Option 3 ID : 264330520148
Option 4 ID : 264330520149
Status : Answered
Chosen Option : 1

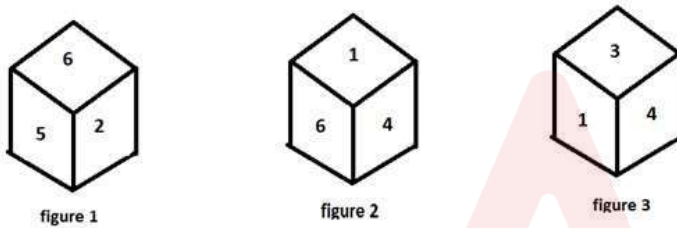
Q.50 Chitrakot Falls is a natural waterfall known as Niagara Falls of India, located on the _____ river in the state of Chhattisgarh, India.

- Ans**
- 1. Varahi River
 - 2. Indravati River
 - 3. Mandovi River
 - 4. Chandravanka River

Question ID : 264330113531
Option 1 ID : 264330446209
Option 2 ID : 264330446212
Option 3 ID : 264330446210
Option 4 ID : 264330446211
Status : Answered
Chosen Option : 2

Section : Reasoning

Q.1 1, 2, 3, 4, 5 and 6 are written on different faces of a dice. Three different positions of the same dice are shown below. Find the number on the face opposite to the one showing '4'.



- Ans**
- 1. 6
 - 2. 1
 - 3. 5
 - 4. 2

Question ID : 264330113926
Option 1 ID : 264330447791
Option 2 ID : 264330447790
Option 3 ID : 264330447789
Option 4 ID : 264330447792
Status : Answered
Chosen Option : 3

Q.2 Select the correct mirror image of the given figure when the mirror is placed at MN as shown below.



- Ans
- 1. g3NiЯ
 - 2. εg RiN
 - 3. εgNiЯ
 - 4. εgNiЯ

Question ID : 26433016660

Option 1 ID : 264330653681

Option 2 ID : 264330653682

Option 3 ID : 264330653679

Option 4 ID : 264330653680

Status : Answered

Chosen Option : 4

Q.3 Which of the following terms will replace the question mark (?) in the given series?
XPEQ, TNIS, ?, LJQW, HHUY

- Ans
- 1. PLNU
 - 2. OLNU
 - 3. OKNV
 - 4. PLMU

Question ID : 264330102185

Option 1 ID : 264330401207

Option 2 ID : 264330401205

Option 3 ID : 264330401208

Option 4 ID : 264330401206

Status : Answered

Chosen Option : 4

Q.4 Two statements are given followed by two conclusions numbered I and II. Assuming the statements to be true, even if they seem to be at variance from commonly known facts, decide which of the conclusions logically follow(s) from the statements.

Statements:

Some Fishes are Cats.

All Cats are Soft.

Conclusions:

I. All Soft are Cats.

II. Some Fishes are Soft.

- Ans
- 1. Neither conclusion I nor II follows.
 - 2. Only conclusion II follows.
 - 3. Both conclusions I and II follow.
 - 4. Only conclusion I follows.

Question ID : 26433076606

Option 1 ID : 264330300491

Option 2 ID : 264330300489

Option 3 ID : 264330300490

Option 4 ID : 264330300488

Status : Answered

Chosen Option : 2

Q.6 Select the correct mirror image of the given figure when the mirror is placed at PQ as shown below.

TResT4121@1



Ans

✗ 1. TResT4121@1

✓ 2. TResT4121@1

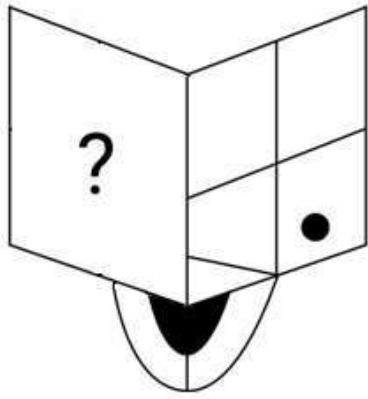
✗ 3. TResT4222@1

✗ 4. TRes1214@1

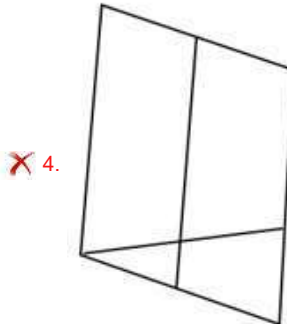
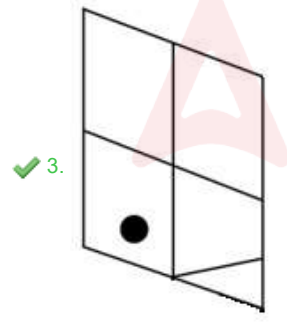
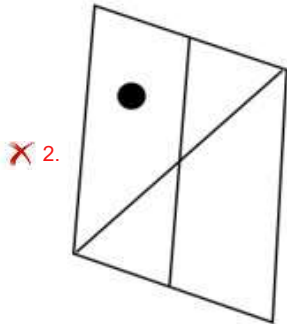
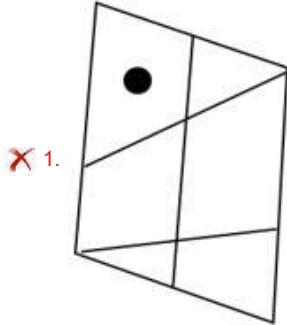
Question ID : 26433082021
Option 1 ID : 264330321919
Option 2 ID : 264330321918
Option 3 ID : 264330321920
Option 4 ID : 264330321917
Status : Answered
Chosen Option : 2

Adda247

Q.7 Select the figure from the options that can replace the question mark (?) and complete the given pattern.



Ans



Question ID : 264330106475

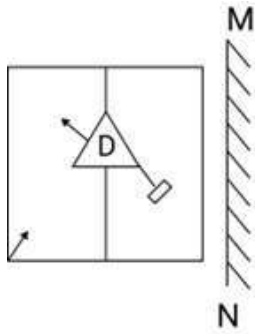
Option 1 ID : 264330418204

Option 2 ID : 264330418201

Option 3 ID : 264330418203

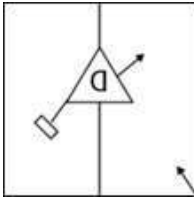
Option 4 ID : 264330418202

Q.8 Select the correct mirror image of the given combination when the mirror is placed at 'MN' as shown below.

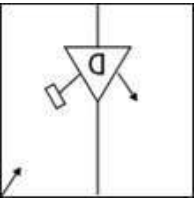


Ans

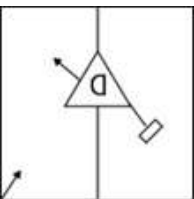
✓ 1.



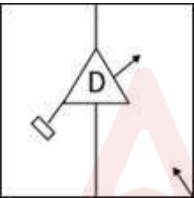
✗ 2.



✗ 3.



✗ 4.



Question ID : 264330130771

Option 1 ID : 264330512196

Option 2 ID : 264330512195

Option 3 ID : 264330512197

Option 4 ID : 264330512198

Status : Answered

Chosen Option : 1

Q.9 In a certain code language, 'SUGAR' is written as 'VHBST' and 'TEAPOT' is written as 'FBQPUU'. How will 'PAINT' be written in that language?

- Ans
- 1. UOJBQ
 - 2. QBJOU
 - 3. BJOUQ
 - 4. BJOQU

Question ID : 26433087167
Option 1 ID : 264330342308
Option 2 ID : 264330342305
Option 3 ID : 264330342306
Option 4 ID : 264330342307
Status : Answered
Chosen Option : 3

Q.10 Select the number from among the given options that can replace the question mark (?) in the following series.

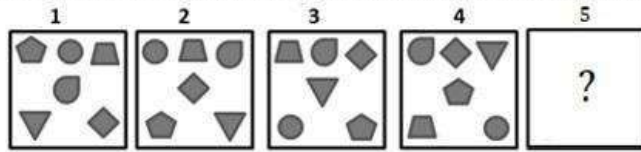
56, 97, 179, 343, 671, ?

- Ans
- 1. 3231
 - 2. 1327
 - 3. 3442
 - 4. 4232

Question ID : 264330109747
Option 1 ID : 264330431266
Option 2 ID : 264330431265
Option 3 ID : 264330431267
Option 4 ID : 264330431268
Status : Answered
Chosen Option : 2

Adda247

Q.11 Following question consists of 4 figures marked 1, 2, 3 and 4 called the Problem Figures followed by 4 other figures called the Answer Figures. Select a figure from amongst the Answer Figures which will continue the same series as established by the four Problem Figures.



Ans

- 1.
- 2.
- 3.
- 4.

Question ID : 264330110541

Option 1 ID : 264330434442

Option 2 ID : 264330434441

Option 3 ID : 264330434444

Option 4 ID : 264330434443

Status : Answered

Chosen Option : 4

Q.12 If 'A' denotes '+', 'B' denotes '×', 'C' denotes '-' and 'D' denotes '÷', then what will come in place of '?' in the following equation?
 $(98 \text{ C } 8) \text{ B } 2 \text{ A } 16 = ?$

- 1. 104
- 2. 98
- 3. 196
- 4. 16

Question ID : 26433082474

Option 1 ID : 264330323731

Option 2 ID : 264330323729

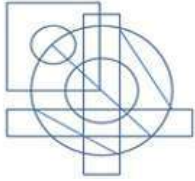
Option 3 ID : 264330323732

Option 4 ID : 264330323730

Status : Answered

Chosen Option : 3

Q.13 Select the option figure that is embedded in the given figure (rotation is NOT allowed).



Ans



Question ID : 26433091724

Option 1 ID : 264330360263

Option 2 ID : 264330360264

Option 3 ID : 264330360261

Option 4 ID : 264330360262

Status : Answered

Chosen Option : 1

Q.14 Select the set in which the numbers are related in the same way as are the numbers of the following sets.

(NOTE : Operations should be performed on the whole numbers, without breaking down the numbers into its constituent digits. E.g. 13 – Operations on 13 such as adding /deleting /multiplying etc. to 13 can be performed. Breaking down 13 into 1 and 3 and then performing mathematical operations on 1 and 3 is NOT allowed)
(12, 44), (17, 64)

Ans ✗ 1. (27, 94)

✗ 2. (31, 124)

✓ 3. (22, 84)

✗ 4. (18, 74)

Question ID : 26433052039

Option 1 ID : 264330203459

Option 2 ID : 264330203461

Option 3 ID : 264330203458

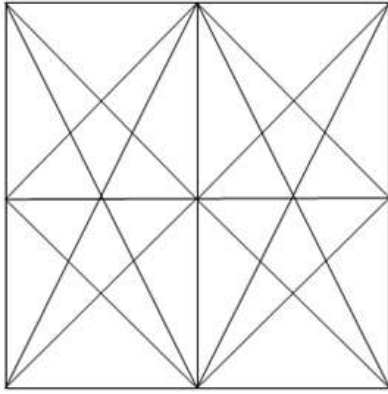
Option 4 ID : 264330203460

Status : Answered

Chosen Option : 3


Q.15 Which of the figures given in the options is embedded in the following figure?

(Rotation is not allowed.)

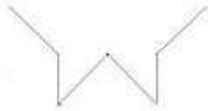


Ans

✓ 1.



✗ 2.



✗ 3.



✗ 4.



Question ID : 26433076730

Option 1 ID : 264330300984

Option 2 ID : 264330300986

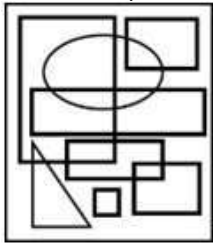
Option 3 ID : 264330300987

Option 4 ID : 264330300985

Status : Answered

Chosen Option : 1

Q.16 Select the option figure which is embedded in the given figure as its part (rotation is NOT allowed).



Ans

- ✗ 1.
- ✓ 2.
- ✗ 3.
- ✗ 4.

Question ID : 264330116992

Option 1 ID : 264330460050

Option 2 ID : 264330460052

Option 3 ID : 264330460049

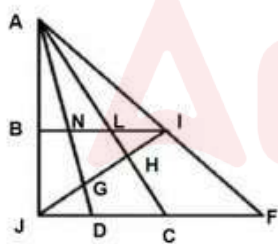
Option 4 ID : 264330460051

Status : Answered

Chosen Option : 2

Q.17

How many triangles are there in the given figure?



- ✗ 1. 23
- ✗ 2. 29
- ✗ 3. 25
- ✓ 4. 24

Question ID : 26433091707

Option 1 ID : 264330360194

Option 2 ID : 264330360196

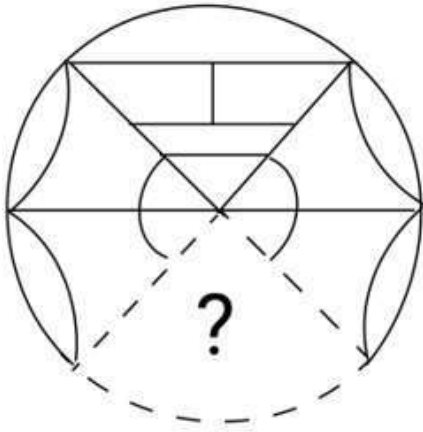
Option 3 ID : 264330360193

Option 4 ID : 264330360195

Status : Marked For Review

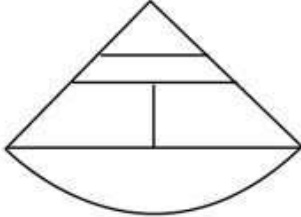
Chosen Option : 1

Q.18 Select the figure from the options that can replace the question mark (?) and complete the given pattern.

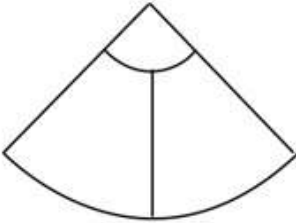


Ans

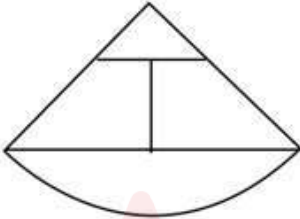
✓ 1.



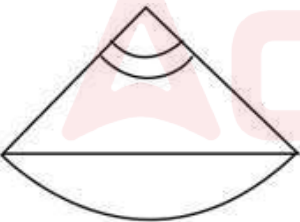
✗ 2.



✗ 3.



✗ 4.



Question ID : 264330106477

Option 1 ID : 264330418210

Option 2 ID : 264330418211

Option 3 ID : 264330418212

Option 4 ID : 264330418209

Status : Answered

Chosen Option : 1

Q.19 Which figure should replace the question mark (?) if the following series were to be continued?

0	9	W	=	0	A	A	=	0	9	A	△	△	9	A	
A	U	=	W	9	U	△	W	9	0	=	W	U	0	=	?
2	☆	△	△	2	☆	2	☆	U	U	2	☆	2	☆	W	

Ans

✓ 1.

=	△	U
A	9	0
W	2	☆

✗ 2.

U	△	9
0	=	A
W	2	☆

✗ 3.

A	△	9
=	U	0
W	2	☆

✗ 4.

W	△	9
A	U	0
=	2	☆

Question ID : 264330103888

Option 1 ID : 264330407855

Option 2 ID : 264330407856

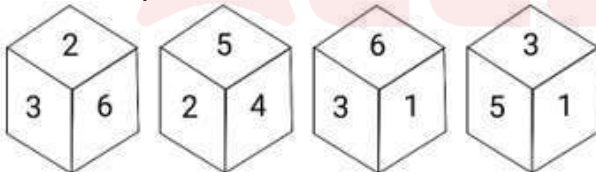
Option 3 ID : 264330407853

Option 4 ID : 264330407854

Status : Answered

Chosen Option : 4

Q.20 Four different positions of the same dice are shown below. What is opposite to 3?



- Ans
- ✗ 1. 6
 - ✗ 2. 1
 - ✓ 3. 4
 - ✗ 4. 2

Question ID : 264330112038

Option 1 ID : 264330440237

Option 2 ID : 264330440239

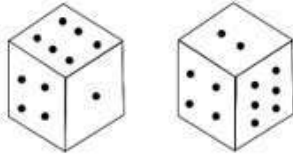
Option 3 ID : 264330440238

Option 4 ID : 264330440240

Status : Answered

Chosen Option : 3

Q.21 Observe the dots on a dice (one to six dots) in the following figures. How many dots are contained on the face opposite to that containing two dots?



- Ans
- 1. Five
 - 2. Six
 - 3. Three
 - 4. One

Question ID : 264330111298

Option 1 ID : 264330437280

Option 2 ID : 264330437279

Option 3 ID : 264330437278

Option 4 ID : 264330437277

Status : Answered

Chosen Option : 1

Q.22 Select the option that is related to the fifth letter-cluster in the same way as the second letter-cluster is related to the first letter-cluster and the fourth letter-cluster is related to the third letter-cluster.

NEVER : PGXGT :: BELOW : DGNQY :: AGAIN : _____

- Ans
- 1. DJDLQ
 - 2. BHBJO
 - 3. CICKP
 - 4. ZFZHM

Question ID : 26433074587

Option 1 ID : 264330292439

Option 2 ID : 264330292437

Option 3 ID : 264330292438

Option 4 ID : 264330292436

Status : Answered

Chosen Option : 3

Q.23 Select the option that is related to the third term in the same way as the second term is related to the first term and the sixth term is related to the fifth term.

34 : 170 :: 68 : ? :: 17 : 85

- Ans
- 1. 360
 - 2. 340
 - 3. 320
 - 4. 300

Question ID : 264330102255

Option 1 ID : 264330401488

Option 2 ID : 264330401487

Option 3 ID : 264330401486

Option 4 ID : 264330401485

Status : Answered

Chosen Option : 2

Q.24 Which two signs should be interchanged to make the following equation correct?

$$2 \times 4 \div 5 - 25 + 5 = 8$$

- Ans
- 1. - and ×
 - 2. - and +
 - 3. ÷ and +
 - 4. ÷ and ×

Question ID : 264330101087
Option 1 ID : 264330396895
Option 2 ID : 264330396894
Option 3 ID : 264330396893
Option 4 ID : 264330396896
Status : Answered
Chosen Option : 3

Q.25 Seven girls - H, J, K, L, M, N and O - are sitting in a straight row, facing north. Only four girls sit between O and N. Only O sits to the right of L. H sits exactly between J and K. Who among the following sits at the extreme left end of the row?

- Ans
- 1. J
 - 2. M
 - 3. K
 - 4. N

Question ID : 26433087015
Option 1 ID : 264330341703
Option 2 ID : 264330341704
Option 3 ID : 264330341702
Option 4 ID : 264330341701
Status : Marked For Review
Chosen Option : 2

Section : Numerical Ability

Q.1 Raju sold a watch to Sanjeev at a 20% gain; Sanjeev sold it to Mukesh at a loss of 10%. If Mukesh bought it for ₹4,860, then at what price did Raju purchase it?

- Ans
- 1. ₹4,450
 - 2. ₹4,500
 - 3. ₹4,400
 - 4. ₹4,550

Question ID : 264330105993
Option 1 ID : 264330416274
Option 2 ID : 264330416275
Option 3 ID : 264330416273
Option 4 ID : 264330416276
Status : Answered
Chosen Option : 2

Q.2 The ratio of a Aman's age to Shivam's age is 4 : 3. The product of their ages is 588. The ratio of their ages after 5 years will be:

- Ans
- 1. 31 : 25
 - 2. 33 : 24
 - 3. 35 : 26
 - 4. 33 : 26

Question ID : 264330105997
Option 1 ID : 264330416289
Option 2 ID : 264330416291
Option 3 ID : 264330416292
Option 4 ID : 264330416290
Status : Answered
Chosen Option : 4

Q.3 The population of a village 4 years ago was 3,20,000. Due to migration to cities, it decreases at the rate of 5% every year. Find the decrease in its population in the last 4 years.

- Ans
- 1. 83,595
 - 2. 59,358
 - 3. 53,985
 - 4. 93,558

Question ID : 264330104316
Option 1 ID : 264330409567
Option 2 ID : 264330409565
Option 3 ID : 264330409568
Option 4 ID : 264330409566
Status : Answered
Chosen Option : 4

Q.4 A thief was noticed by a policeman from a distance of 300 m. Seeing the policeman, the thief started running at 12 km/h and the policeman chased him at 13 km/h. What is the distance between them after 12 minutes?

- Ans
- 1. 90 m
 - 2. 120 m
 - 3. 105 m
 - 4. 100 m

Question ID : 264330183828
Option 1 ID : 264330720988
Option 2 ID : 264330720989
Option 3 ID : 264330720990
Option 4 ID : 264330720991
Status : Answered
Chosen Option : 2

Q.5 Which of the following numbers is a prime number?

- Ans 1. 143
 2. 137
 3. 141
 4. 133

Question ID : 264330106070
Option 1 ID : 264330416584
Option 2 ID : 264330416582
Option 3 ID : 264330416583
Option 4 ID : 264330416581
Status : Answered
Chosen Option : 2

Q.6 What is the value of $4 \times 0.4 \times 0.04 \times 0.004 \times 40$?

- Ans 1. 0.1024
 2. 0.0256
 3. 0.01024
 4. 0.00256

Question ID : 264330104341
Option 1 ID : 264330409665
Option 2 ID : 264330409668
Option 3 ID : 264330409667
Option 4 ID : 264330409666
Status : Answered
Chosen Option : 3

Q.7 A shopkeeper marks up the price of an article by 60%. He offers two successive discounts of 10% and 15% on it. He earns X% profit. What is the value of X?

- Ans 1. 20.4
 2. 22.4
 3. 23.60
 4. 25.60

Question ID : 264330183842
Option 1 ID : 264330721044
Option 2 ID : 264330721045
Option 3 ID : 264330721046
Option 4 ID : 264330721047
Status : Answered
Chosen Option : 2

Q.8

Simplify the following.

$$\frac{0.4 \times 0.4 + 0.2 \times 0.02}{0.016}$$

Ans

1. $10\frac{1}{8}$

2. $10\frac{1}{4}$

3. $10\frac{1}{2}$

4. $10\frac{1}{5}$

Question ID : 264330106065

Option 1 ID : 264330416564

Option 2 ID : 264330416562

Option 3 ID : 264330416561

Option 4 ID : 264330416563

Status : Answered

Chosen Option : 2

Q.9 The average of 7 consecutive integers is 7. What is the value of the greatest number in these?

Ans 1. 10

2. 12

3. 11

4. 9

Question ID : 264330126094

Option 1 ID : 264330494048

Option 2 ID : 264330494051

Option 3 ID : 264330494050

Option 4 ID : 264330494049

Status : Answered

Chosen Option : 1

Q.10 A student's marks (out of 100 in each subject) changed from the first term exams to the second term exams as follows: in Mathematics from 60 to 78, in Science 84 to 82, in Social studies 76 to 64. What is the percentage change in his marks from the first term exams to the second term exams?

Ans 1. 1.81% increase

2. 2.24% increase

3. 2.24% decrease

4. 1.81% decrease

Question ID : 264330103695

Option 1 ID : 264330407086

Option 2 ID : 264330407088

Option 3 ID : 264330407085

Option 4 ID : 264330407087

Status : Answered

Chosen Option : 1

Q.11 A pillar 42 cm in diameter is 15 m high. How much material (in cm^3) was used to construct it?

(Take $\pi = \frac{22}{7}$)

- Ans
- 1. 2.079×10^6
 - 2. 2.079×10^{-4}
 - 3. 2.079×10^5
 - 4. 2.079×10^{-3}

Question ID : 264330112442

Option 1 ID : 264330441856

Option 2 ID : 264330441854

Option 3 ID : 264330441855

Option 4 ID : 264330441853

Status : Answered

Chosen Option : 1

Q.12 A sum becomes two times in 4 years at a certain rate of simple interest. Find the time (in years) in which the same amount will be seven times at the same rate of interest.

- Ans
- 1. 12
 - 2. 20
 - 3. 13
 - 4. 24

Question ID : 264330119201

Option 1 ID : 264330467092

Option 2 ID : 264330467094

Option 3 ID : 264330467093

Option 4 ID : 264330467091

Status : Answered

Chosen Option : 4

Q.13 Ram and Shyam together can complete a work in 12 days. Shyam alone can complete the work in 15 days. Shyam alone worked for 5 days. After that, how long will Ram alone take to complete the work?

- Ans
- 1. 29 days
 - 2. 38 days
 - 3. 35 days
 - 4. 40 days

Question ID : 264330104325

Option 1 ID : 264330409601

Option 2 ID : 264330409603

Option 3 ID : 264330409602

Option 4 ID : 264330409604

Status : Answered

Chosen Option : 4

Q.14 The price of CNG is increased by 12%. By what percentage (correct up to two decimal places) must Shalini reduce consumption of CNG for her car so that there is no increment in her expenditure on CNG?

- Ans
- 1. 13.64%
 - 2. 12.00%
 - 3. 10.71%
 - 4. 9.33%

Question ID : 264330106665
Option 1 ID : 264330418963
Option 2 ID : 264330418961
Option 3 ID : 264330418962
Option 4 ID : 264330418964
Status : Answered
Chosen Option : 3

Q.15 How many litres of water can a hemispherical bowl of radius 3 cm hold?
(Use $\pi = 3.14$)

- Ans
- 1. 56.52
 - 2. 0.05652
 - 3. 54.34
 - 4. 0.05275

Question ID : 264330111494
Option 1 ID : 264330438063
Option 2 ID : 264330438064
Option 3 ID : 264330438062
Option 4 ID : 264330438061
Status : Answered
Chosen Option : 1

Section : Computer Proficiency

Q.1 F1 is the shortcut key used by almost every Windows program to display which of the following menus?

- Ans
- 1. Rename
 - 2. Edit
 - 3. Help
 - 4. Refresh

Question ID : 264330175985
Option 1 ID : 264330690238
Option 2 ID : 264330690236
Option 3 ID : 264330690237
Option 4 ID : 264330690235
Status : Answered
Chosen Option : 3

Q.2 In MS Excel 365, how can you set a specific print area in MS Excel?

- Ans 1. By selecting the cells to be printed and defining the print area
2. By adjusting the page margins in the print settings
3. By changing the font size and style in the spreadsheet
4. By applying conditional formatting to the data

Question ID : 264330177919
Option 1 ID : 264330697764
Option 2 ID : 264330697763
Option 3 ID : 264330697765
Option 4 ID : 264330697766
Status : Answered
Chosen Option : 1

Q.3 Which of the following is the correct software used for Word processing?

- Ans 1. MS Excel
2. MS PowerPoint
3. MS Word
4. MS Access

Question ID : 264330176731
Option 1 ID : 264330693139
Option 2 ID : 264330693140
Option 3 ID : 264330693142
Option 4 ID : 264330693141
Status : Answered
Chosen Option : 3

Q.4 What is the purpose of spellcheck in email composition?

- Ans 1. To check for and correct spelling errors
2. To format the email text
3. To add attachments to the email
4. To translate the email into another language

Question ID : 264330180657
Option 1 ID : 264330708597
Option 2 ID : 264330708596
Option 3 ID : 264330708598
Option 4 ID : 264330708595
Status : Answered
Chosen Option : 1

Q.5 If the custom format of a number is XX,XX,XXX then how will 4482023 be displayed in Microsoft Excel 365?

- Ans 1. 448,20,23
2. 4,48,2023
3. 44,82,023
4. 4482, 02,3

Question ID : 264330182057
Option 1 ID : 264330714069
Option 2 ID : 264330714067
Option 3 ID : 264330714068
Option 4 ID : 264330714070
Status : Answered
Chosen Option : 3

Q.6 Which of the following is NOT an example of Instant Messaging in Internet?

- Ans
- 1. Discord
 - 2. Telegram
 - 3. WhatsApp
 - 4. Email

Question ID : 264330180394
Option 1 ID : 264330707546
Option 2 ID : 264330707545
Option 3 ID : 264330707544
Option 4 ID : 264330707543
Status : Answered
Chosen Option : 1

Q.7 What is the default alignment for text entered in Microsoft Excel 365 cells?

- Ans
- 1. Left aligned
 - 2. Justified
 - 3. Right aligned
 - 4. Center aligned

Question ID : 264330180699
Option 1 ID : 264330708763
Option 2 ID : 264330708766
Option 3 ID : 264330708765
Option 4 ID : 264330708764
Status : Answered
Chosen Option : 1

Q.8 In MS word 365, in word-processing software, what is the key difference between copying of text and cutting of text?

- Ans
- 1. Copying is reversible, while cutting is irreversible.
 - 2. Copying removes the text from the original location, while cutting retains the text in the original location.
 - 3. Copying duplicates the text to a new location, while cutting moves the text to a new location.
 - 4. Copying requires the use of a keyboard shortcut, while cutting is performed by using the mouse.

Question ID : 264330178087
Option 1 ID : 264330698414
Option 2 ID : 264330698412
Option 3 ID : 264330698411
Option 4 ID : 264330698413
Status : Answered
Chosen Option : 3

Q.9 What is the keyboard shortcut for changing text alignment to the left in MS Word 365?

- Ans
- 1. Ctrl + J
 - 2. Ctrl + C
 - 3. Ctrl + L
 - 4. Ctrl + R

Question ID : 264330180852
Option 1 ID : 264330709374
Option 2 ID : 264330709372
Option 3 ID : 264330709371
Option 4 ID : 264330709373
Status : Answered
Chosen Option : 3

Q.10 Which of the following is NOT a word processing package?

Ans ✓ 1. Adobe Photoshop

✗ 2. Microsoft Word

✗ 3. Apple Pages

✗ 4. Google Docs

Question ID : 264330179463

Option 1 ID : 264330703854

Option 2 ID : 264330703851

Option 3 ID : 264330703853

Option 4 ID : 264330703852

Status : Answered

Chosen Option : 1



Constable Executive Male and Female in Delhi Police Examination 2023

Roll Number	
Candidate Name	
Venue Name	iON Digital Zone iDZ Tatisilwai
Exam Date	03/12/2023
Exam Time	9:00 AM - 10:30 AM
Subject	Constable Executive Male and Female in Delhi Police Examination 2023

Section : **General Knowledge**

Q.1 Which of the following players is associated with para-badminton?

- Ans
- 1. Sumit Antil
 - 2. Manish Narwal
 - 3. Avani Lekhara
 - 4. Krishna Nagar

Question ID : 264330118891
Option 1 ID : 264330466222
Option 2 ID : 264330466221
Option 3 ID : 264330466220
Option 4 ID : 264330466219
Status : Not Answered
Chosen Option : --

Q.2 According to the Census of India 2011, which is the second most literate state in India?

- Ans
- 1. Mizoram
 - 2. Karnataka
 - 3. Odisha
 - 4. Tripura

Question ID : 264330182972
Option 1 ID : 264330717621
Option 2 ID : 264330717620
Option 3 ID : 264330717623
Option 4 ID : 264330717622
Status : Not Answered
Chosen Option : --

Q.3 Sitara Devi was a _____ dancer of India.

- Ans
- 1. Kuchipudi
 - 2. Kathak
 - 3. Bharatanatyam
 - 4. Kathakali

Question ID : 26433094876
Option 1 ID : 264330372328
Option 2 ID : 264330372326
Option 3 ID : 264330372327
Option 4 ID : 264330372325
Status : Not Answered
Chosen Option : --

Q.4 Avani Lekhara is associated with which of the following sports?

- Ans 1. Freestyle wrestling
 2. Para-athletics
 3. Para-badminton
 4. Paralympic shooting

Question ID : 264330176742
Option 1 ID : 264330693185
Option 2 ID : 264330693183
Option 3 ID : 264330693184
Option 4 ID : 264330693186
Status : Not Answered
Chosen Option : --

Q.5 Which of the following Articles are related to Right Against Exploitation?

- Ans 1. Article 28-29
 2. Article 23-24
 3. Article 31-32
 4. Article 25-26

Question ID : 264330173491
Option 1 ID : 264330680445
Option 2 ID : 264330680443
Option 3 ID : 264330680446
Option 4 ID : 264330680444
Status : Answered
Chosen Option : 3

Q.6 In 8th century India, Nagabhata I established which of the following Rajput dynasties in Malwa region?

- Ans 1. Tomara
 2. Gurjara-Pratihara
 3. Chauhan
 4. Parmara

Question ID : 264330175620
Option 1 ID : 264330688802
Option 2 ID : 264330688799
Option 3 ID : 264330688800
Option 4 ID : 264330688801
Status : Answered
Chosen Option : 2

Q.7 In which of the following years was the Election Commission of India established?

- Ans 1. 1954
 2. 1957
 3. 1950
 4. 1960

Question ID : 26433086825
Option 1 ID : 264330340943
Option 2 ID : 264330340942
Option 3 ID : 264330340944
Option 4 ID : 264330340941
Status : Not Answered
Chosen Option : --

Q.8 Which Satavahana king restored the Satavahana realm to its earlier greatness around 125 CE?

- Ans 1. Gautamiputra
 2. Krishna III
 3. Mihira Bhoja
 4. Rajaraja I

Question ID : 264330120140
Option 1 ID : 264330470815
Option 2 ID : 264330470817
Option 3 ID : 264330470816
Option 4 ID : 264330470818
Status : Not Answered
Chosen Option : --

Q.9 Harmika is one of the features of _____ in Buddhist architecture.

- Ans 1. chaityas
 2. pillars
 3. viharas
 4. stupas

Question ID : 26433086647
Option 1 ID : 264330340229
Option 2 ID : 264330340232
Option 3 ID : 264330340231
Option 4 ID : 264330340230
Status : Not Answered
Chosen Option : --

Q.10 The federal scheme, Judiciary and Governors system of the Constitution of India are drawn from the _____.

- Ans 1. Government of India Act, 1919
 2. Government of India Act, 1935
 3. Government of India Act of 1942
 4. Government of India Act of 1945

Question ID : 264330130429
Option 1 ID : 264330510827
Option 2 ID : 264330510828
Option 3 ID : 264330510829
Option 4 ID : 264330510830
Status : Answered
Chosen Option : 2

Q.11 In which Olympics did Abhinav Bindra win the gold medal in Men's 10 m air rifle shooting?

- Ans 1. London 2012
 2. Athens 2004
 3. Beijing 2008
 4. Rio 2016

Question ID : 264330119261
Option 1 ID : 264330467332
Option 2 ID : 264330467331
Option 3 ID : 264330467333
Option 4 ID : 264330467334
Status : Not Answered
Chosen Option : --

Q.12 Who among the following gave the famous words, 'One Caste, One Religion, One God for all men'?

- Ans
- 1. Sri Narayana Guru
 - 2. Jyotirao Phule
 - 3. Swami Vivekananda
 - 4. Raja Ram Mohan Roy

Question ID : 264330119012
Option 1 ID : 264330466705
Option 2 ID : 264330466706
Option 3 ID : 264330466703
Option 4 ID : 264330466704
Status : Not Answered
Chosen Option : --

Q.13 By which Constitutional Amendment Act can the same person be appointed as the Governor of two or more states?

- Ans
- 1. 9th Constitutional Amendment Act
 - 2. 11th Constitutional Amendment Act
 - 3. 7th Constitutional Amendment Act
 - 4. 18th Constitutional Amendment Act

Question ID : 264330177771
Option 1 ID : 264330697192
Option 2 ID : 264330697193
Option 3 ID : 264330697191
Option 4 ID : 264330697194
Status : Not Answered
Chosen Option : --

Q.14 Dark patches on the sun are referred to as:

- Ans
- 1. sun spots
 - 2. dark spots
 - 3. moon spots
 - 4. earth spots

Question ID : 264330131733
Option 1 ID : 264330516034
Option 2 ID : 264330516031
Option 3 ID : 264330516032
Option 4 ID : 264330516033
Status : Answered
Chosen Option : 1

Q.15 which of the following materials were pillars in Stupas built during Ashoka's reign?

- Ans
- 1. Granite
 - 2. Stone
 - 3. Marble
 - 4. Bricks

Question ID : 264330106225
Option 1 ID : 264330417201
Option 2 ID : 264330417203
Option 3 ID : 264330417204
Option 4 ID : 264330417202
Status : Answered
Chosen Option : 2

Q.16 जीडीपी (GDP) के संबंध में निम्नलिखित में से कौन सा कथन सही है?
I. जीडीपी का उपयोग मानव विकास को मापने के लिए किया जाता है।
II. जीडीपी का प्राक्कलन करते समय बाह्यताओं को नहीं लिया जाता है।
III. जीडीपी का प्राक्कलन करते समय गृहिणियों द्वारा प्रदान की जाने वाली सेवाओं को शामिल किया जाता है।

- Ans
- 1. केवल III
 - 2. केवल II
 - 3. केवल I और II
 - 4. केवल I

Question ID : 264330141493
Option 1 ID : 264330554310
Option 2 ID : 264330554309
Option 3 ID : 264330554308
Option 4 ID : 264330554307
Status : Answered
Chosen Option : 2

Q.17 Who among the following was the son of Ustad Allauidin Khan?

- Ans
- 1. Aamir Khan
 - 2. Ali Akbar Khan
 - 3. Amjad Ali Khan
 - 4. Jakir Husain

Question ID : 26433074125
Option 1 ID : 264330290622
Option 2 ID : 264330290621
Option 3 ID : 264330290620
Option 4 ID : 264330290623
Status : Not Answered
Chosen Option : --

Q.18 In which Five-Year Plan was the family planning programme undertaken?

- Ans
- 1. 4th Five-Year Plan
 - 2. 5th Five-Year Plan
 - 3. 7th Five-Year Plan
 - 4. 2nd Five-Year Plan

Question ID : 264330120209
Option 1 ID : 264330471092
Option 2 ID : 264330471093
Option 3 ID : 264330471094
Option 4 ID : 264330471091
Status : Not Answered
Chosen Option : --

Q.19 Which of the following is NOT an Indian multinational company?

- Ans 1. Arvind Mills Limited
 2. General Motors Company
 3. Tata Consultancy Services Limited
 4. Asian Paints Limited

Question ID : 264330112489
Option 1 ID : 264330442041
Option 2 ID : 264330442044
Option 3 ID : 264330442042
Option 4 ID : 264330442043
Status : Answered
Chosen Option : 2

Q.20 The HPCL Rajasthan Refinery Ltd (HRRL) is being constructed in which district (as of December 2022)?

- Ans 1. Barmer
 2. Jalore
 3. Jaisalmer
 4. Bikaner

Question ID : 264330120316
Option 1 ID : 264330471515
Option 2 ID : 264330471518
Option 3 ID : 264330471516
Option 4 ID : 264330471517
Status : Not Answered
Chosen Option : --

Q.21 A follower of Gokhale, Narayan Malhar Joshi founded the Social Service League in Bombay, in which of the following years?

- Ans 1. 1914
 2. 1913
 3. 1911
 4. 1912

Question ID : 264330171701
Option 1 ID : 264330673410
Option 2 ID : 264330673409
Option 3 ID : 264330673407
Option 4 ID : 264330673408
Status : Not Answered
Chosen Option : --

Q.22 'Unbreakable' is an autobiography of an Indian Boxer _____ and co-authored by Dina Serto.

- Ans 1. Mary Kom
 2. Laishram Sarita Devi
 3. Lovlina Borgohain
 4. Vijender Singh

Question ID : 264330112859
Option 1 ID : 264330443523
Option 2 ID : 264330443524
Option 3 ID : 264330443521
Option 4 ID : 264330443522
Status : Not Answered
Chosen Option : --

Q.23 Conservation of biological diversity and sustainable use of its components are the main objectives of which of the following treaties/protocols?

- Ans 1. Nagoya protocol
 2. Rio protocol
 3. Geneva protocol
 4. Montreal protocol

Question ID : 264330111900
Option 1 ID : 264330439686
Option 2 ID : 264330439687
Option 3 ID : 264330439688
Option 4 ID : 264330439685
Status : Not Answered
Chosen Option : --

Q.24 The Hindustan Republican Association was reorganised into Hindustan Socialist Republican Association (HSRA) at Feroz Shah Kotla Ground in Delhi on 8th and 9th September _____.

- Ans 1. 1927
 2. 1930
 3. 1929
 4. 1928

Question ID : 264330166875
Option 1 ID : 264330654535
Option 2 ID : 264330654538
Option 3 ID : 264330654537
Option 4 ID : 264330654536
Status : Not Answered
Chosen Option : --

Q.25 Gopika Verma, the famous _____ dancer received various awards, including the Sangeet Natak Akademi Award in 2018.

- Ans 1. Mohiniattam
 2. Odissi
 3. Bharatanatyam
 4. Sattriya

Question ID : 264330111966
Option 1 ID : 264330439950
Option 2 ID : 264330439949
Option 3 ID : 264330439952
Option 4 ID : 264330439951
Status : Not Answered
Chosen Option : --

Q.26 Which of the following is the first national park that was established in India?

- Ans
- 1. Gir National Park
 - 2. Kaziranga National Park
 - 3. Jim Corbett National Park
 - 4. Rajaji National Park

Question ID : 264330179024
Option 1 ID : 264330702102
Option 2 ID : 264330702101
Option 3 ID : 264330702100
Option 4 ID : 264330702099
Status : Answered
Chosen Option : 4

Q.27 The government budget is prepared under which article of the Constitution of India?

- Ans
- 1. Article 109
 - 2. Article 101
 - 3. Article 100
 - 4. Article 112

Question ID : 264330120863
Option 1 ID : 264330473669
Option 2 ID : 264330473668
Option 3 ID : 264330473667
Option 4 ID : 264330473670
Status : Answered
Chosen Option : 4

Q.28 Who among the following is the exponent of mandolin?

- Ans
- 1. N Rajam
 - 2. N Ramani
 - 3. U Srinivas
 - 4. Annapurna Devi

Question ID : 264330111938
Option 1 ID : 264330439839
Option 2 ID : 264330439837
Option 3 ID : 264330439838
Option 4 ID : 264330439840
Status : Not Answered
Chosen Option : --

Q.29 The terms Mahari and Gotipua are associated with which Indian classical dance form?

- Ans
- 1. Kuchipudi
 - 2. Odissi
 - 3. Sattriya
 - 4. Manipuri

Question ID : 264330132387
Option 1 ID : 264330518646
Option 2 ID : 264330518644
Option 3 ID : 264330518645
Option 4 ID : 264330518643
Status : Not Answered
Chosen Option : --

Q.30 Who among the following was the Chief Guest in the Republic Day Parade organised at Rajpath in the year 1955?

- Ans
- 1. Abdel Fatah-al-Sisi
 - 2. General Malik Ghulam Muhammad
 - 3. Queen Elizabeth II
 - 4. Nelson Mandela

Question ID : 264330182990
Option 1 ID : 264330717694
Option 2 ID : 264330717695
Option 3 ID : 264330717693
Option 4 ID : 264330717692
Status : Not Answered
Chosen Option : --

Q.31 _____ is related to hockey.

- Ans
- 1. Thomas Cup
 - 2. Ranji Trophy
 - 3. Aga Khan Cup
 - 4. Davis Cup

Question ID : 264330133032
Option 1 ID : 264330521185
Option 2 ID : 264330521184
Option 3 ID : 264330521183
Option 4 ID : 264330521186
Status : Not Answered
Chosen Option : --

Q.32 The Make in India Scheme of the Government is administered under the _____ .

- Ans
- 1. Ministry of External Affairs
 - 2. Ministry of Commerce & Industry
 - 3. Ministry of Finance
 - 4. Ministry of Electronics & Information Technology

Question ID : 264330109117
Option 1 ID : 264330428748
Option 2 ID : 264330428745
Option 3 ID : 264330428746
Option 4 ID : 264330428747
Status : Answered
Chosen Option : 2

Q.33 As per Census of India 2011, identify the state in which the population density was recorded more than 100 people / sq.km.

- Ans
- 1. Arunachal Pradesh
 - 2. Mizoram
 - 3. Sikkim
 - 4. Rajasthan

Question ID : 264330179428
Option 1 ID : 264330703715
Option 2 ID : 264330703718
Option 3 ID : 264330703717
Option 4 ID : 264330703716
Status : Not Answered
Chosen Option : --

Q.34 What was the major approach of the Second Five-Year Plan towards industrialisation?

- Ans
- 1. Focus on infrastructure so as to create employment opportunities in the urban areas
 - 2. Expansion of the public sector so as to create a base of heavy industry
 - 3. Focus on mass consumption goods so as to control inflation
 - 4. Expansion of the cottage industry so as to create employment opportunities in the rural areas

Question ID : 264330112479
Option 1 ID : 264330442004
Option 2 ID : 264330442003
Option 3 ID : 264330442001
Option 4 ID : 264330442002
Status : Not Answered
Chosen Option : --

Q.35 Which of the following rivers is known as Dakshin Ganga?

- Ans
- 1. Tapi
 - 2. Narmada
 - 3. Kaveri
 - 4. Godavari

Question ID : 264330117637
Option 1 ID : 264330462576
Option 2 ID : 264330462573
Option 3 ID : 264330462574
Option 4 ID : 264330462575
Status : Not Answered
Chosen Option : --

Q.36 In which state is the Kundang Lem Festival celebrated?

- Ans
- 1. Madhya Pradesh
 - 2. Punjab
 - 3. Kerala
 - 4. Nagaland

Question ID : 264330113176
Option 1 ID : 264330444792
Option 2 ID : 264330444789
Option 3 ID : 264330444791
Option 4 ID : 264330444790
Status : Not Answered
Chosen Option : --

Q.37 Which state is the leading producer of Jowar as of 2022?

- Ans
- 1. Andhra Pradesh
 - 2. Uttar Pradesh
 - 3. Maharashtra
 - 4. Odisha

Question ID : 264330131749
Option 1 ID : 264330516095
Option 2 ID : 264330516098
Option 3 ID : 264330516096
Option 4 ID : 264330516097
Status : Not Answered
Chosen Option : --

Q.38 In which of the following years was the Child Marriage Restraint Act passed in India?

- Ans
- 1. 1951
 - 2. 1929
 - 3. 1936
 - 4. 1947

Question ID : 264330119023
Option 1 ID : 264330466747
Option 2 ID : 264330466750
Option 3 ID : 264330466749
Option 4 ID : 264330466748
Status : Answered
Chosen Option : 1

Q.39 Which of the following type of biome have the subtype called as 'Tropical Savannah'?

- Ans
- 1. desert
 - 2. forest
 - 3. aquatic
 - 4. grassland

Question ID : 264330178109
Option 1 ID : 264330698500
Option 2 ID : 264330698499
Option 3 ID : 264330698502
Option 4 ID : 264330698501
Status : Not Answered
Chosen Option : --

Q.40 Which Ministry is responsible for collecting data and publishing literacy rates in India?

- Ans
- 1. Ministry of Statistics and Programme Implementation
 - 2. Ministry of Rural Development
 - 3. Ministry of External Affairs
 - 4. Ministry of Education

Question ID : 264330183037
Option 1 ID : 264330717881
Option 2 ID : 264330717882
Option 3 ID : 264330717883
Option 4 ID : 264330717880
Status : Answered
Chosen Option : 1

Q.41 The collegium system of appointment of Judges to the High Court and Supreme Court came into existence by virtue of _____.

- Ans
- 1. a decision by the Cabinet Committee
 - 2. a Constitutional Amendment
 - 3. an act of Parliament
 - 4. a result of three separate cases before the Supreme Court

Question ID : 264330130478
Option 1 ID : 264330511026
Option 2 ID : 264330511024
Option 3 ID : 264330511025
Option 4 ID : 264330511023
Status : Answered
Chosen Option : 3

Q.42 The last ruler of the Mauryan Empire was:

- Ans
- 1. Dasharatha Maurya
 - 2. Shalishuka
 - 3. Samprati
 - 4. Brihadratha

Question ID : 264330171663
Option 1 ID : 264330673256
Option 2 ID : 264330673257
Option 3 ID : 264330673255
Option 4 ID : 264330673258
Status : Answered
Chosen Option : 4

Q.43 The Anglo-Mysore Wars were a series of _____ wars fought during the 18th century between the rulers of Mysore and the English East India Company.

- Ans
- 1. three
 - 2. six
 - 3. two
 - 4. four

Question ID : 264330119767
Option 1 ID : 264330469346
Option 2 ID : 264330469343
Option 3 ID : 264330469345
Option 4 ID : 264330469344
Status : Answered
Chosen Option : 1

Q.44 From which of the following countries were the principles of liberty, equality and fraternity taken in the Indian Constitution?

- Ans
- 1. United Kingdom
 - 2. France
 - 3. Ireland
 - 4. United States of America

Question ID : 264330130446
Option 1 ID : 264330510897
Option 2 ID : 264330510895
Option 3 ID : 264330510896
Option 4 ID : 264330510898
Status : Answered
Chosen Option : 4

Q.45 Which of the following classical dances is associated with Saint Srimanta Sankardev?

- Ans
- 1. Mohiniyattam
 - 2. Odissi
 - 3. Sattriya
 - 4. Kathakali

Question ID : 264330110403
Option 1 ID : 264330433890
Option 2 ID : 264330433891
Option 3 ID : 264330433892
Option 4 ID : 264330433889
Status : Not Answered
Chosen Option : --

Q.46 In an pond ecosystem, the first trophic level includes _____.

- Ans
- 1. grasshopper
 - 2. zooplankton
 - 3. phytoplankton
 - 4. cow

Question ID : 264330117607
Option 1 ID : 264330462455
Option 2 ID : 264330462454
Option 3 ID : 264330462453
Option 4 ID : 264330462456
Status : Answered
Chosen Option : 1

Q.47 The Fundamental Rights can be suspended during the operation of a National Emergency except the rights guaranteed by _____.

- Ans
- 1. Articles 14 and 15
 - 2. Articles 20 and 21
 - 3. Article 23 and 24
 - 4. Articles 18 and 19

Question ID : 264330110792
Option 1 ID : 264330435445
Option 2 ID : 264330435446
Option 3 ID : 264330435448
Option 4 ID : 264330435447
Status : Answered
Chosen Option : 4

Q.48 'Wings of Fire' is an autobiography of which of the following personalities?

- Ans
- 1. Inder Kumar Gujral
 - 2. APJ Abdul Kalam
 - 3. K Sivan
 - 4. Pranab Mukherjee

Question ID : 26433055356
Option 1 ID : 264330216411
Option 2 ID : 264330216410
Option 3 ID : 264330216408
Option 4 ID : 264330216409
Status : Answered
Chosen Option : 2

Q.49 Which of the following is/are NOT a part of the financial sector?

- Ans
- 1. Department of Agriculture & Farmers Welfare
 - 2. Investment banks
 - 3. Commercial banks
 - 4. Stock exchange operations

Question ID : 264330111606
Option 1 ID : 264330438512
Option 2 ID : 264330438510
Option 3 ID : 264330438509
Option 4 ID : 264330438511
Status : Answered
Chosen Option : 1

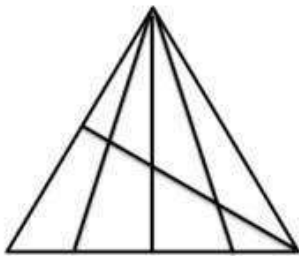
Q.50 The phenomenon of change of liquid into vapours at any temperature below its boiling point is called:

- Ans
- 1. Melting
 - 2. Fusion
 - 3. Sublimation
 - 4. Evaporation

Question ID : 264330182939
Option 1 ID : 264330717488
Option 2 ID : 264330717490
Option 3 ID : 264330717489
Option 4 ID : 264330717491
Status : Answered
Chosen Option : 4

Section : Reasoning

Q.1 How many triangles are there in the given figure?



- Ans
- 1. 25
 - 2. 24
 - 3. 23
 - 4. 18

Question ID : 26433069081
Option 1 ID : 264330270837
Option 2 ID : 264330270838
Option 3 ID : 264330270836
Option 4 ID : 264330270839
Status : Answered
Chosen Option : 3

Q.2 Select the option that is related to the third word in the same way as the second word is related to the first word.

(The words must be considered as meaningful English words and must not be related to each other based on the number of letters/number of consonants/vowels in the word)

Linen : Flax :: Road : ?

- Ans
- 1. Copper
 - 2. Ore
 - 3. Brass
 - 4. Asphalt

Question ID : 26433070283
Option 1 ID : 264330275608
Option 2 ID : 264330275611
Option 3 ID : 264330275609
Option 4 ID : 264330275610
Status : Answered
Chosen Option : 2

Q.3 Select the number from among the given options that can replace the question mark (?) in the following series.

5, 21, 69, 213, 645, ?

Ans 1. 3224

2. 323

3. 6343

4. 1941

Question ID : 264330109748

Option 1 ID : 264330431270

Option 2 ID : 264330431269

Option 3 ID : 264330431272

Option 4 ID : 264330431271

Status : Answered

Chosen Option : 4

Q.4 Select the set in which the numbers are related in the same way as do the numbers of the following sets.

(NOTE: Operations should be performed on the whole numbers, without breaking down the numbers into their constituent digits. E.g. 13 – Operations on 13 such as adding/subtracting/multiplying etc. to 13 can be performed. Breaking down 13 into 1 and 3 and then performing mathematical operations on 1 and 3 is not allowed.)

(58, 34, 72)

(46, 28, 54)

Ans 1. (56, 32, 68)

2. (62, 34, 84)

3. (48, 26, 56)

4. (52, 24, 94)

Question ID : 264330177414

Option 1 ID : 264330695829

Option 2 ID : 264330695830

Option 3 ID : 264330695827

Option 4 ID : 264330695828

Status : Answered

Chosen Option : 1

Q.5 In a code language, if PIGEON is coded as 11-18-20-22-12-13 and NEST is coded as 13-22-8-7, then how will WOODPECKER be coded?

Ans 1. 4-12-12-23-11-22-24-16-22-9

2. 5-13-13-24-12-23-25-17-23-10

3. 3-11-11-22-10-21-23-15-21-8

4. 4-11-11-23-11-21-24-15-21-9

Question ID : 26433089483

Option 1 ID : 264330351433

Option 2 ID : 264330351436

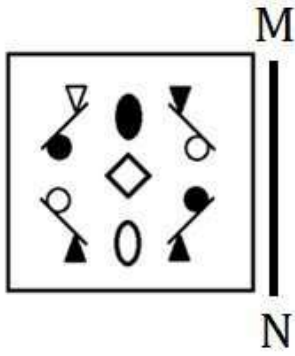
Option 3 ID : 264330351434

Option 4 ID : 264330351435

Status : Answered

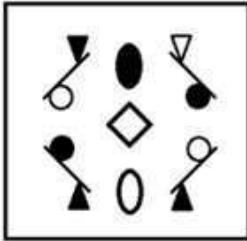
Chosen Option : 1

Q.6 Select the correct mirror image of the given figure when the mirror is placed at MN as shown below.




Ans


✓ 1.




✗ 2.



✗ 3.



✗ 4.



Question ID : 264330114700

Option 1 ID : 264330450886

Option 2 ID : 264330450887

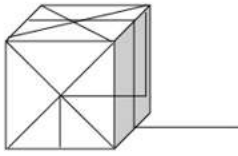
Option 3 ID : 264330450888

Option 4 ID : 264330450885

Status : Answered

Chosen Option : 1

Q.7 Select the option that is embedded in the given figure (rotation is NOT allowed).



Ans

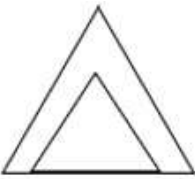
✗ 1.



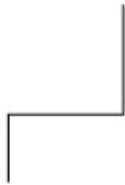
✗ 2.



✗ 3.



✓ 4.



Question ID : 26433082893

Option 1 ID : 264330325407

Option 2 ID : 264330325408

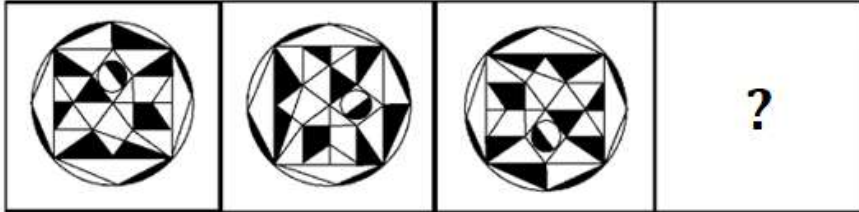
Option 3 ID : 264330325405

Option 4 ID : 264330325406

Status : Answered

Chosen Option : 4

Q.8 Select the figure that will come next in the following figure series.



Ans

- 1.
- 2.
- 3.
- 4.

Question ID : 264330129652

Option 1 ID : 264330507974

Option 2 ID : 264330507975

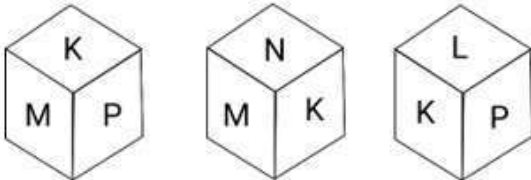
Option 3 ID : 264330507976

Option 4 ID : 264330507977

Status : Answered

Chosen Option : 4

Q.9 Six letters, K, L, M, N, O and P are written on different faces of a dice. Three positions of this dice are shown here. Find the letter on the face opposite K.



- Ans
- 1. L
 - 2. M
 - 3. N
 - 4. O

Question ID : 264330106400

Option 1 ID : 264330417901

Option 2 ID : 264330417903

Option 3 ID : 264330417904

Option 4 ID : 264330417902

Status : Answered

Chosen Option : 4

Q.10 Seven people - A, B, C, D, X, Y and Z - are sitting in a straight row, facing north. Only two people sit to the left of D. B sits second to the left of Z. Y sits third to the left of A. Only one person sits to the right of X. Who among the following sits at the second position from the left?

- Ans
- 1. B
 - 2. C
 - 3. Y
 - 4. A

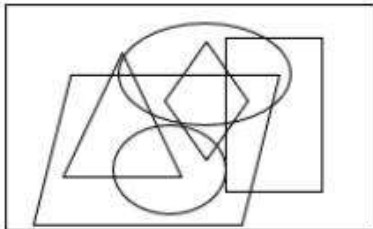
Question ID : 26433087022
 Option 1 ID : 264330341731
 Option 2 ID : 264330341729
 Option 3 ID : 264330341730
 Option 4 ID : 264330341732
 Status : Answered
 Chosen Option : 2

Q.11 Select the option in which the given figure is embedded. (Rotation is NOT allowed.)

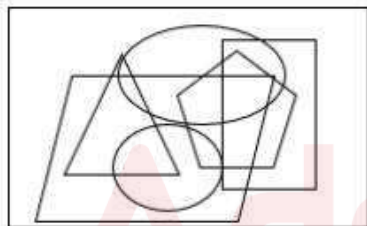


Ans

1.



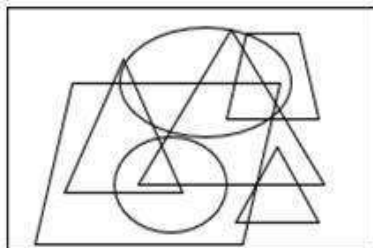
2.



3.

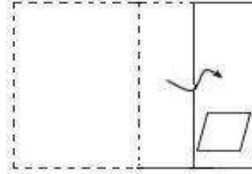
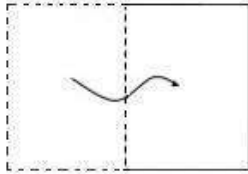


4.



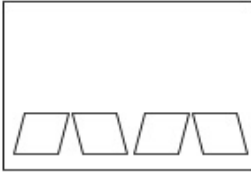
Question ID : 26433092515
 Option 1 ID : 264330363351
 Option 2 ID : 264330363352
 Option 3 ID : 264330363350
 Option 4 ID : 264330363349
 Status : Answered
 Chosen Option : 2

Q.12 A paper is folded and cut as shown below. How will it appear when unfolded?

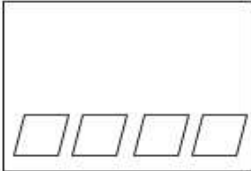


Ans

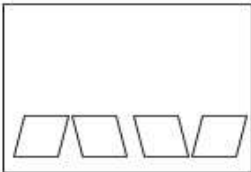
✗ 1.



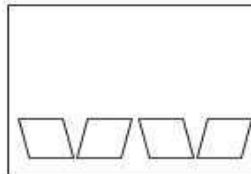
✗ 2.



✗ 3.



✓ 4.



Question ID : 264330118717

Option 1 ID : 264330466122

Option 2 ID : 264330466121

Option 3 ID : 264330466119

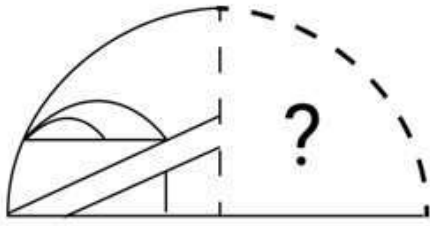
Option 4 ID : 264330466120

Status : Answered

Chosen Option : 4

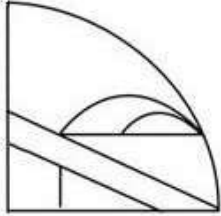
Adda247

Q.13 Select the figure from the options that can replace the question mark (?) and complete the given pattern.

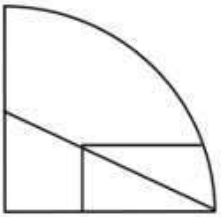


Ans

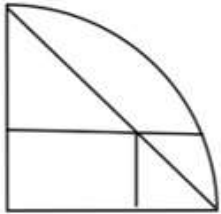
✓ 1.



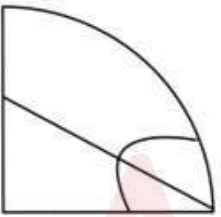
✗ 2.



✗ 3.



✗ 4.



Question ID : 264330106473

Option 1 ID : 264330418196

Option 2 ID : 264330418195


Option 3 ID : 264330418194

Option 4 ID : 264330418193

Status : Answered

Chosen Option : 1

Q.14 Select the figure that will replace the question mark (?) in the following figure series.



Ans

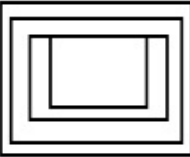
✓ 1.



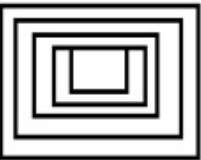
✗ 2.



✗ 3.



✗ 4.



Question ID : 264330112029

Option 1 ID : 264330440201

Option 2 ID : 264330440204

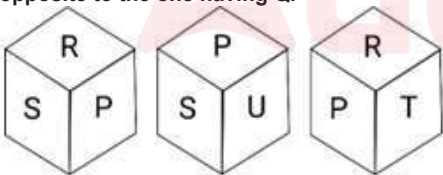
Option 3 ID : 264330440202

Option 4 ID : 264330440203

Status : Answered

Chosen Option : 1

Q.15 Six letters P, Q, R, S, T and U are written on different faces of a dice. Three different positions of this dice are shown in the figure. Select the letter that will be on the face opposite to the one having Q.



Ans ✗ 1. R

✓ 2. P

✗ 3. U

✗ 4. T

Question ID : 264330121790

Option 1 ID : 264330477332

Option 2 ID : 264330477334

Option 3 ID : 264330477333

Option 4 ID : 264330477331

Status : Answered

Chosen Option : 2

Q.16 Select the correct combination of mathematical signs to sequentially replace the * signs and to balance the given equation.
 $23*2*10*20*5 = 40$

Ans 1. + × - ÷

2. × - + ÷

3. - + ÷ ×

4. + - × ÷

Question ID : 26433085645

Option 1 ID : 264330336281

Option 2 ID : 264330336282

Option 3 ID : 264330336284

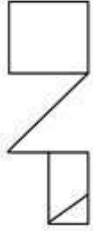
Option 4 ID : 264330336283

Status : Answered

Chosen Option : 2

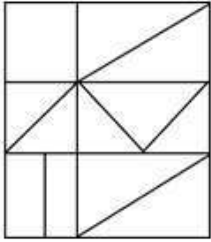


Q.17 Select the option in which the given figure is embedded (rotation is NOT allowed).

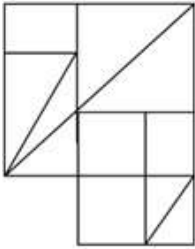


Ans

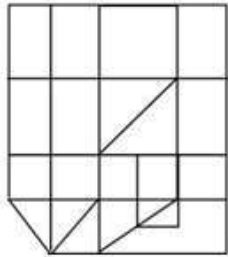
✗ 1.



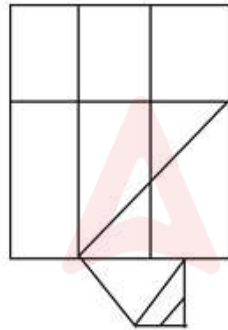
✗ 2.



✓ 3.



✗ 4.



Question ID : 264330114684

Option 1 ID : 264330450821

Option 2 ID : 264330450824

Option 3 ID : 264330450823

Option 4 ID : 264330450822

Status : Answered

Chosen Option : 3

Q.18 8 is related to 67 following a certain logic. Following the same logic, 4 is related to 19.
To which of the following is 6 related following the same logic?

- Ans
- 1. 31
 - 2. 32
 - 3. 39
 - 4. 28

Question ID : 264330178749
Option 1 ID : 264330701023
Option 2 ID : 264330701025
Option 3 ID : 264330701026
Option 4 ID : 264330701024
Status : Answered
Chosen Option : 3

Q.19 Which of the following terms will replace the question mark (?) in the given series?

JASX, LWUT, NSWP, POYL, ?

- Ans
- 1. SJAH
 - 2. RJBG
 - 3. SKBF
 - 4. RKAH

Question ID : 26433090968
Option 1 ID : 264330357283
Option 2 ID : 264330357282
Option 3 ID : 264330357281
Option 4 ID : 264330357284
Status : Answered
Chosen Option : 4

Q.20 Read the given statements and conclusions carefully. Assuming that the information given in the statements is true, even if it appears to be at variance with commonly known facts, decide which of the given conclusions logically follow(s) from the statements.

Statements:

Some blankets are quilts.

Some quilts are bedsheets.

Conclusions:

I. All bedsheets are blankets.

II. Some bedsheets are blankets.

- Ans
- 1. Neither conclusion I nor II follows
 - 2. Only conclusion II follows
 - 3. Only conclusion I follows
 - 4. Both conclusions I and II follow

Question ID : 26433069509
Option 1 ID : 264330272551
Option 2 ID : 264330272549
Option 3 ID : 264330272548
Option 4 ID : 264330272550
Status : Answered
Chosen Option : 1

Q.21 Select the correct combination of mathematical signs to replace the * signs and to balance the given equation.

$$264 * 4 * 7 * 87 * 370 * 5$$

- Ans
- 1. $\times - = + \div$
 - 2. $\div \times - + =$
 - 3. $\div \times - = +$
 - 4. $\div \times = + -$

Question ID : 26433085726
 Option 1 ID : 264330336605
 Option 2 ID : 264330336608
 Option 3 ID : 264330336607
 Option 4 ID : 264330336606
 Status : Answered
 Chosen Option : 3

Q.22 Given below is a series of figures – A, B, C and D which follow a particular pattern. Which of the given option figures should come in place of E to continue the series?

Ω	+	∇	B	△	∩	+	□	
∇	△	△	+	+	B	B	∩	?

(A) (B) (C) (D) (E)

- Ans
- 1.

∩	G
□	●
 - 2.

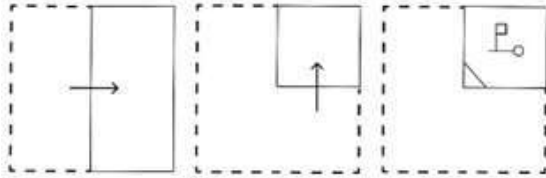
B	●
∩	□
 - 3.

B	∇
∩	□
 - 4.

●	B
∩	□

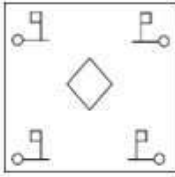
Question ID : 264330111287
 Option 1 ID : 264330437235
 Option 2 ID : 264330437236
 Option 3 ID : 264330437233
 Option 4 ID : 264330437234
 Status : Answered
 Chosen Option : 2

Q.23 A paper is folded and cut as shown below. How will it appear when unfolded?

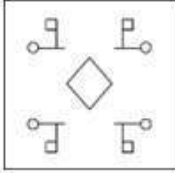


Ans

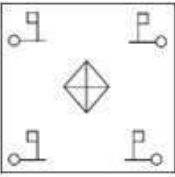
✗ 1.



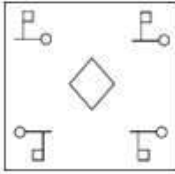
✓ 2.



✗ 3.



✗ 4.



Question ID : 264330114711

Option 1 ID : 264330450929

Option 2 ID : 264330450931

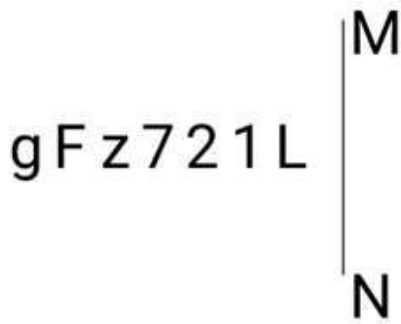
Option 3 ID : 264330450932

Option 4 ID : 264330450930

Status : Answered

Chosen Option : 2

Q.24 Select the correct mirror image of the given figure when the mirror is placed at MN as shown below.



Ans

1. J127zFg

2. J1z7zFg

3. J1z7zFg

4. J1z7zFg

Question ID : 264330126677

Option 1 ID : 264330496383

Option 2 ID : 264330496380

Option 3 ID : 264330496382

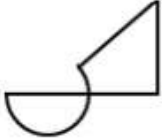
Option 4 ID : 264330496381

Status : Answered

Chosen Option : 2

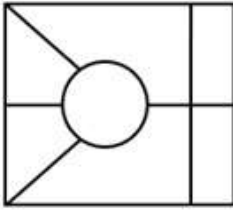
Adda247

Q.25 Select the option in which the given figure is embedded (rotation is NOT allowed).

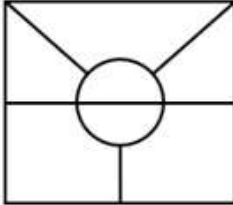


Ans

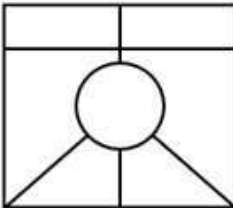
✗ 1.



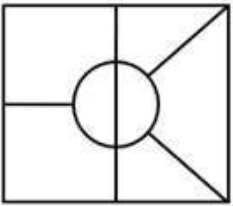
✓ 2.



✗ 3.



✗ 4.



Question ID : 264330106329

Option 1 ID : 264330417618

Option 2 ID : 264330417619

Option 3 ID : 264330417620

Option 4 ID : 264330417617

Status : Answered

Chosen Option : 2

Section : Numerical Ability

Q.1 A boy goes to his school from his house at a speed of 5 km/h and returns at a speed of 10 km/h, then the average speed of the boy is:

Ans

1. $4\frac{1}{3}$ km/h

2. $3\frac{2}{3}$ km/h

3. $3\frac{1}{3}$ km/h

4. $6\frac{2}{3}$ km/h

Question ID : 264330122989

Option 1 ID : 264330482020

Option 2 ID : 264330482021

Option 3 ID : 264330482019

Option 4 ID : 264330482022

Status : Answered

Chosen Option : 4

Q.2 For a cylinder with a radius of 3 units and height of 8 units, what is the length of the largest straight rod that can be put inside it?

Ans 1. 10

2. 12

3. 9

4. 11

Question ID : 264330112124

Option 1 ID : 264330440583

Option 2 ID : 264330440584

Option 3 ID : 264330440582

Option 4 ID : 264330440581

Status : Not Answered

Chosen Option : --

Q.3 The income of a person first increased by 10% and then it is decreased by 10%. What is the change in his income?

Ans 1. 2% (increase)

2. 1% (decrease)

3. 5% (decrease)

4. 2% (decrease)

Question ID : 264330126177

Option 1 ID : 264330494381

Option 2 ID : 264330494380

Option 3 ID : 264330494383

Option 4 ID : 264330494382

Status : Answered

Chosen Option : 2

Q.4 The HCF of 408 and 1309 is:

- Ans 1. 19
 2. 21
 3. 17
 4. 15

Question ID : 264330104467
Option 1 ID : 264330410170
Option 2 ID : 264330410172
Option 3 ID : 264330410171
Option 4 ID : 264330410169
Status : Answered
Chosen Option : 3

Q.5 एक इलेक्ट्रिक बाइक ₹1 लाख में उपलब्ध है। एक ग्राहक को ₹20,800 का डाउन पेमेंट देना होगा, इसके बाद 4 बराबर किश्तें देनी होंगी। यदि ब्याज की दर 25% वार्षिक साधारण ब्याज है, तो 4 वार्षिक किश्तों की गणना करें।

- Ans 1. ₹21,210
 2. ₹22,110
 3. ₹28,800
 4. ₹21,120

Question ID : 264330122077
Option 1 ID : 264330478444
Option 2 ID : 264330478443
Option 3 ID : 264330478446
Option 4 ID : 264330478445
Status : Not Answered
Chosen Option : --

Q.6 If the ratio of A and B is 4 : 3 and the ratio of B and C is 7 : 2, what is the ratio of A, B and C?

- Ans 1. 28 : 21 : 6
 2. 8 : 21 : 14
 3. 28 : 6 : 8
 4. 21 : 28 : 6

Question ID : 264330130005
Option 1 ID : 264330509252
Option 2 ID : 264330509253
Option 3 ID : 264330509251
Option 4 ID : 264330509254
Status : Answered
Chosen Option : 1

Q.7 The concentration of three acids, P, Q and R, is given as 15%, 25% and 35%, respectively. They are mixed in the ratio of $x : 3 : 5$, resulting in a 28% concentration solution. What is the value of x ?

Ans 1. 2

2. 4

3. 1

4. 3

Question ID : 264330179322

Option 1 ID : 264330703292

Option 2 ID : 264330703294

Option 3 ID : 264330703291

Option 4 ID : 264330703293

Status : Answered

Chosen Option : 3

Q.8 The sum of the smallest three-digit prime number and the largest three-digit prime number is:

Ans 1. 1098

2. 1100

3. 1104

4. 1093

Question ID : 264330112413

Option 1 ID : 264330441737

Option 2 ID : 264330441738

Option 3 ID : 264330441739

Option 4 ID : 264330441740

Status : Answered

Chosen Option : 1

Q.9 The radius of a giant metal spherical ball is 12 cm. Its outer surface is required to be painted. What will be the cost of the painting at the rate of ₹7 per cm^2 . (Approximate to the nearest integer) (Take $\pi = \frac{22}{7}$)

Ans 1. ₹12,672

2. ₹11,664

3. ₹10,684

4. ₹13,168

Question ID : 26433091573

Option 1 ID : 264330359659

Option 2 ID : 264330359658

Option 3 ID : 264330359657

Option 4 ID : 264330359660

Status : Answered

Chosen Option : 1

Q.10 Rohan's monthly salary is increased from ₹40,000 to ₹45,000. What is the percentage increment in his monthly salary?

- Ans
- 1. 10.5%
 - 2. 12%
 - 3. 11%
 - 4. 12.5%

Question ID : 264330103935
Option 1 ID : 264330408041
Option 2 ID : 264330408044
Option 3 ID : 264330408043
Option 4 ID : 264330408042
Status : Answered
Chosen Option : 4

Q.11 The tag price of an item is ₹250. After a discount of $x\%$ of tag price, the shopkeeper earns $1.25x\%$ profit. What is the cost of the item if $x=10$?

- Ans
- 1. ₹210
 - 2. ₹190
 - 3. ₹220
 - 4. ₹200

Question ID : 264330126117
Option 1 ID : 264330494141
Option 2 ID : 264330494143
Option 3 ID : 264330494142
Option 4 ID : 264330494140
Status : Answered
Chosen Option : 4

Q.12 Ayush buys an old digital camera for ₹9,200 and spends ₹1,200 on its repair. If Ayush sells the digital camera for ₹12,000, what is his profit percentage (correct up to two decimal places)?

- Ans
- 1. 15.38%
 - 2. 13.58%
 - 3. 19.73%
 - 4. 17.39%

Question ID : 264330103951
Option 1 ID : 264330408107
Option 2 ID : 264330408105
Option 3 ID : 264330408108
Option 4 ID : 264330408106
Status : Answered
Chosen Option : 1

Q.13 The LCM of 98, 145 and 505 is:

- Ans
- 1. 1852010
 - 2. 1636120
 - 3. 1715201
 - 4. 1435210

Question ID : 264330104469
Option 1 ID : 264330410180
Option 2 ID : 264330410177
Option 3 ID : 264330410179
Option 4 ID : 264330410178
Status : Answered
Chosen Option : 4

Q.14 Prakash can do a piece of work in 18 days. If Mukesh works twice as fast as Prakash, how long would it take to finish the work, working together?

- Ans
- 1. 6 days
 - 2. 5 days
 - 3. 7 days
 - 4. 4 days

Question ID : 264330103629
Option 1 ID : 264330406823
Option 2 ID : 264330406822
Option 3 ID : 264330406824
Option 4 ID : 264330406821
Status : Answered
Chosen Option : 1

Q.15 What is the rate of compound interest if a sum becomes $\frac{1331}{729}$ times of itself in 3 years?

- Ans
- 1. $33\frac{1}{9}\%$
 - 2. $21\frac{7}{9}\%$
 - 3. $22\frac{2}{9}\%$
 - 4. $11\frac{7}{9}\%$

Question ID : 264330104402
Option 1 ID : 264330409910
Option 2 ID : 264330409912
Option 3 ID : 264330409909
Option 4 ID : 264330409911
Status : Answered
Chosen Option : 4

Q.1 In MS Word 365, which of the following is the default font style and size in the Font style and size dropdown list when a new document is opened in Windows 10?

- Ans**
- 1. Calibri, 11
 - 2. Aharoni, 11
 - 3. Times New Roman, 11
 - 4. Arial, 11

Question ID : 264330180642
Option 1 ID : 264330708535
Option 2 ID : 264330708538
Option 3 ID : 264330708536
Option 4 ID : 264330708537
Status : Not Answered
Chosen Option : --

Q.2 Which option allows you to create a table in MS-Word 365?

- Ans**
- 1. Table Insertion
 - 2. Table Creation
 - 3. Table Design
 - 4. Table Layout

Question ID : 264330173332
Option 1 ID : 264330679810
Option 2 ID : 264330679809
Option 3 ID : 264330679808
Option 4 ID : 264330679807
Status : Answered
Chosen Option : 2

Q.3 If an email is sent to more than one person, the email addresses are separated by which of the following symbols?

- Ans**
- 1. Paper clip icon
 - 2. Comma
 - 3. Equal
 - 4. At the rate of

Question ID : 264330175933
Option 1 ID : 264330690029
Option 2 ID : 264330690027
Option 3 ID : 264330690030
Option 4 ID : 264330690028
Status : Answered
Chosen Option : 1

Q.4 In MS-Word 365, which option allows you to manually review and correct spelling and grammar errors in your document by providing suggestions and explanations for each flagged item?

- Ans**
- 1. Thesaurus
 - 2. Word Count
 - 3. Spelling and Grammar Check
 - 4. AutoCorrect

Question ID : 264330178089
Option 1 ID : 264330698422
Option 2 ID : 264330698420
Option 3 ID : 264330698421
Option 4 ID : 264330698419
Status : Answered
Chosen Option : 3

Q.5 In Microsoft Excel 365, which keyboard shortcut is used to copy the selected text or cells for pasting them to a new location within the same worksheet?

- Ans**
- 1. Ctrl + D
 - 2. Ctrl + C
 - 3. Ctrl + X
 - 4. Ctrl + V

Question ID : 264330178747
Option 1 ID : 264330701018
Option 2 ID : 264330701015
Option 3 ID : 264330701016
Option 4 ID : 264330701017
Status : Not Answered
Chosen Option : --

Q.6 Which is the following methods is used in unguided transmission media?

- Ans**
- 1. Infrared
 - 2. Coaxial cable
 - 3. Twisted pair cable
 - 4. Optical fibre cable

Question ID : 264330182750
Option 1 ID : 264330716771
Option 2 ID : 264330716772
Option 3 ID : 264330716773
Option 4 ID : 264330716774
Status : Answered
Chosen Option : 1

Q.7 Which of the following charts is used in MS Excel 365 to display data as a series of points connected by straight lines and is used for showing trends over time?

- Ans**
- 1. Line chart
 - 2. Bar chart
 - 3. Pie chart
 - 4. Column chart

Question ID : 264330180818
Option 1 ID : 264330709237
Option 2 ID : 264330709236
Option 3 ID : 264330709238
Option 4 ID : 264330709235
Status : Answered
Chosen Option : 1

Q.8 In MS Excel 365 how can you quickly delete a row in Excel without using the context menu or ribbon options?

- Ans**
- 1. Select the row and press Ctrl and the – (minus) key.
 - 2. Select the row and press Shift+Delete.
 - 3. Select the row and press the Delete key.
 - 4. Select the row and press Alt+Delete.

Question ID : 264330177668
Option 1 ID : 264330696788
Option 2 ID : 264330696789
Option 3 ID : 264330696787
Option 4 ID : 264330696790
Status : Answered
Chosen Option : 3

Q.9 What does the 'Search' or 'Find' allow you to do in MS Word 365?

- Ans**
- 1. Change the document's font
 - 2. Open a new document
 - 3. Print the current document
 - 4. Locate specific words or topics in the Help content

Question ID : 264330180858
Option 1 ID : 264330709395
Option 2 ID : 264330709398
Option 3 ID : 264330709397
Option 4 ID : 264330709396
Status : Answered
Chosen Option : 4

Q.10 Which option in Microsoft Word 365 allows you to search for a specific word or phrase in the document and replace it with another?

- Ans**
- 1. Font Formatting
 - 2. Cut and Paste
 - 3. Spelling & Grammar
 - 4. Find and Replace

Question ID : 264330180718

Option 1 ID : 264330708842

Option 2 ID : 264330708841

Option 3 ID : 264330708840

Option 4 ID : 264330708839

Status : Answered

Chosen Option : 4



Constable Executive Male and Female in Delhi Police Examination 2023

Roll Number	
Candidate Name	
Venue Name	iON Digital Zone iDZ Kanti
Exam Date	03/12/2023
Exam Time	12:00 PM - 1:30 PM
Subject	Constable Executive Male and Female in Delhi Police Examination 2023

Section : **General Knowledge**

Q.1 The first National Games known as the Indian Olympic Games were hosted before independence in the year _____ .

- Ans**
- 1. 1924
 - 2. 1926
 - 3. 1930
 - 4. 1928

Question ID : 264330132531
Option 1 ID : 264330519219
Option 2 ID : 264330519220
Option 3 ID : 264330519222
Option 4 ID : 264330519221
Status : Answered
Chosen Option : 4

Q.2 Which method is also known as the 'Income Disposable Method'?

- Ans**
- 1. Product method
 - 2. Divisible method
 - 3. Income method
 - 4. Expenditure method

Question ID : 264330116510
Option 1 ID : 264330458128
Option 2 ID : 264330458125
Option 3 ID : 264330458127
Option 4 ID : 264330458126
Status : Answered
Chosen Option : 4

Q.3 Which of the following alternatives best describes the term 'phamsana' in context to temple architecture?

- Ans**
- 1. A structure of flat round slab at the top of the temple
 - 2. Temple roofs that are composed of several slabs
 - 3. The distance between the Garbhagriha and mandapa
 - 4. The top of the temple where the dhwaja (flag) is situated

Question ID : 264330165330
Option 1 ID : 264330648402
Option 2 ID : 264330648401
Option 3 ID : 264330648400
Option 4 ID : 264330648399
Status : Answered
Chosen Option : 1

Q.4 Which of the following dance forms originated in Kuchelapuri or Kuchelapuram, in the 3rd century BC in South India?

- Ans
- 1. Odissi
 - 2. Kuchipudi
 - 3. Kathakali
 - 4. Bharatnatyam

Question ID : 264330110400
Option 1 ID : 264330433879
Option 2 ID : 264330433878
Option 3 ID : 264330433880
Option 4 ID : 264330433877
Status : Answered
Chosen Option : 2

Q.5 वल्लभी के मैत्रक वंश के संस्थापक कौन थे?

- Ans
- 1. यशोधर्मन
 - 2. इशान वर्मा
 - 3. भटार्क
 - 4. बालादित्य

Question ID : 264330119723
Option 1 ID : 264330469167
Option 2 ID : 264330469168
Option 3 ID : 264330469169
Option 4 ID : 264330469170
Status : Answered
Chosen Option : 1

Q.6 दरभंगा हवाई अड्डा भारत के किस राज्य में स्थित है?

- Ans
- 1. पश्चिम बंगाल
 - 2. कर्नाटक
 - 3. बिहार
 - 4. उत्तर प्रदेश

Question ID : 264330183064
Option 1 ID : 264330717989
Option 2 ID : 264330717990
Option 3 ID : 264330717988
Option 4 ID : 264330717991
Status : Answered
Chosen Option : 3

Q.7 The LPG model of development was introduced in 1991 by the then Finance Minister

- Ans
- 1. P Chidambaram
 - 2. PV Narasimha Rao
 - 3. Pranab Mukherjee
 - 4. Dr Manmohan Singh

Question ID : 264330110022
Option 1 ID : 264330432368
Option 2 ID : 264330432365
Option 3 ID : 264330432366
Option 4 ID : 264330432367
Status : Answered
Chosen Option : 4

Q.8 Which form of dance is Padma Subrahmanyam well known for?

Ans 1. Bharatnatyam

2. Kathakali

3. Kuchipudi

4. Mohiniyattam

Question ID : 26433086942

Option 1 ID : 264330341409

Option 2 ID : 264330341410

Option 3 ID : 264330341412

Option 4 ID : 264330341411

Status : Not Answered

Chosen Option : --

Q.9 A standing committee is a committee consisting of members of which of the following houses of Parliament?

1. Rajya Sabha

2. Lok Sabha

3. Vidhan Sabha

Ans 1. Both Rajya Sabha and Lok Sabha

2. Vidhan Sabha

3. Rajya Sabha

4. Lok Sabha

Question ID : 264330177757

Option 1 ID : 264330697138

Option 2 ID : 264330697137

Option 3 ID : 264330697135

Option 4 ID : 264330697136

Status : Answered

Chosen Option : 1

Q.10 Which of the following ministries was responsible for governing 'Indira Awaas Yojana'?

Ans 1. Ministry of Rural Development

2. Ministry of Human Resource Development

3. Ministry of Social Justice and Empowerment

4. Ministry of Labour and Employment

Question ID : 264330110186

Option 1 ID : 264330433023

Option 2 ID : 264330433022

Option 3 ID : 264330433024

Option 4 ID : 264330433021

Status : Answered

Chosen Option : 1

Q.11 सातवीं पंचवर्षीय योजना निम्नलिखित में से किस समय-अवधि के लिए थी?

- Ans
- 1. 1980-1985
 - 2. 1992-1997
 - 3. 1978-1983
 - 4. 1985-1990

Question ID : 264330117739
Option 1 ID : 264330462771
Option 2 ID : 264330462774
Option 3 ID : 264330462772
Option 4 ID : 264330462773
Status : Answered
Chosen Option : 4

Q.12 निम्नलिखित में से कौन-सा मुख्य रूप से सिख त्योहार नहीं है?

- Ans
- 1. होला मोहल्ला
 - 2. ज्ञान पंचमी
 - 3. बैशाखी
 - 4. लोहड़ी

Question ID : 264330132410
Option 1 ID : 264330518735
Option 2 ID : 264330518738
Option 3 ID : 264330518737
Option 4 ID : 264330518736
Status : Answered
Chosen Option : 1

Q.13 The proclamation of Constitutional Emergency must be approved by both the houses of parliament within _____ from the date of its issue.

- Ans
- 1. 2 months
 - 2. 3 months
 - 3. 6 months
 - 4. 12 months

Question ID : 264330120201
Option 1 ID : 264330471059
Option 2 ID : 264330471060
Option 3 ID : 264330471061
Option 4 ID : 264330471062
Status : Answered
Chosen Option : 3

Q.14 'What Happened to Netaji' was written by whom among the following?

- Ans
- 1. Arvind Adiga
 - 2. Vikram Seth
 - 3. Kiran Desai
 - 4. Anuj Dhar

Question ID : 26433064229
Option 1 ID : 264330251511
Option 2 ID : 264330251509
Option 3 ID : 264330251510
Option 4 ID : 264330251508
Status : Answered
Chosen Option : 2

Q.15 The Ryotwari (Peasant) System of 1820 was implemented in which of the following regions?

- Ans
- 1. Madras and Punjab
 - 2. Rajasthan and Delhi
 - 3. Madras and Bombay
 - 4. Bengal and Bombay

Question ID : 264330183249
Option 1 ID : 264330718729
Option 2 ID : 264330718730
Option 3 ID : 264330718731
Option 4 ID : 264330718728
Status : Answered
Chosen Option : 1

Q.16 According to the census of India 2011, the lowest female literacy rate was recorded in the state of _____.

- Ans
- 1. Maharashtra
 - 2. Chhattisgarh
 - 3. Bihar
 - 4. West Bengal

Question ID : 264330120333
Option 1 ID : 264330471583
Option 2 ID : 264330471584
Option 3 ID : 264330471586
Option 4 ID : 264330471585
Status : Answered
Chosen Option : 3

Q.17 For how many vaccine-preventable diseases are immunizations provided under the Universal Immunization Programme?

- Ans
- 1. 15
 - 2. 12
 - 3. 9
 - 4. 11

Question ID : 264330109415
Option 1 ID : 264330429940
Option 2 ID : 264330429939
Option 3 ID : 264330429937
Option 4 ID : 264330429938
Status : Not Answered
Chosen Option : --

Q.18 Who among the following Bollywood singers received the Padma Shri in 2022?

- Ans
- 1. Arijit Singh
 - 2. Sonu Nigam
 - 3. Shankar Mahadevan
 - 4. AR Rahman

Question ID : 264330111963
Option 1 ID : 264330439937
Option 2 ID : 264330439940
Option 3 ID : 264330439938
Option 4 ID : 264330439939
Status : Answered
Chosen Option : 1

Q.19 In which of the following states is the 'Jhora' dance performed as a springtime celebration?

- Ans
- 1. Maharashtra
 - 2. Tripura
 - 3. Karnataka
 - 4. Uttarakhand

Question ID : 264330106191
Option 1 ID : 264330417068
Option 2 ID : 264330417067
Option 3 ID : 264330417066
Option 4 ID : 264330417065
Status : Answered
Chosen Option : 1

Q.20 From their mother's side, Mughal rulers were the descendants of _____.

- Ans
- 1. Mahmud Ghazni
 - 2. Iltutmish
 - 3. Genghis Khan
 - 4. Timur

Question ID : 264330111387
Option 1 ID : 264330437636
Option 2 ID : 264330437635
Option 3 ID : 264330437633
Option 4 ID : 264330437634
Status : Answered
Chosen Option : 3

Q.21 आर्य समाज की स्थापना कब की गई?

- Ans
- 1. 1893 में
 - 2. 1875 में
 - 3. 1828 में
 - 4. 1867 में

Question ID : 264330120306
Option 1 ID : 264330471478
Option 2 ID : 264330471477
Option 3 ID : 264330471475
Option 4 ID : 264330471476
Status : Answered
Chosen Option : 2

Q.22 The famous 'Sriharikota' island of India is well known as _____.

- Ans
- 1. the largest island in India
 - 2. a famous hill station
 - 3. a Space centre
 - 4. an IIM center

Question ID : 264330180578
Option 1 ID : 264330708280
Option 2 ID : 264330708281
Option 3 ID : 264330708279
Option 4 ID : 264330708282
Status : Answered
Chosen Option : 3

Q.23 What is the trend of the biological wealth of our planet?

- Ans
- 1. Increasing
 - 2. Cyclical
 - 3. Constant
 - 4. Decreasing

Question ID : 264330113338

Option 1 ID : 264330445437

Option 2 ID : 264330445440

Option 3 ID : 264330445439

Option 4 ID : 264330445438

Status : Answered

Chosen Option : 4

Q.24 मौलिक कर्तव्यों के संबंध में निम्नलिखित में से कौन-सा/से कथन सत्य है/हैं?

- A. वे राष्ट्र-विरोधी तत्त्वों और असामाजिक गतिविधियों के खिलाफ चेतावनी के रूप में कार्य करते हैं।
- B. वे नागरिकों के लिए प्रेरणा के स्रोत के रूप में कार्य करते हैं और उनमें अनुशासन और प्रतिबद्धता की भावना को बढ़ावा देते हैं।
- C. मौलिक कर्तव्यों के उल्लंघन के खिलाफ कोई कानूनी प्रतिबंध नहीं है।

- Ans
- 1. केवल B और C
 - 2. केवल A और C
 - 3. केवल A और B
 - 4. A, B और C

Question ID : 264330114754

Option 1 ID : 264330451102

Option 2 ID : 264330451103

Option 3 ID : 264330451104

Option 4 ID : 264330451101

Status : Answered

Chosen Option : 1

Q.25 Which economic systems generally give preference to planning to make economic policies?

- Ans
- 1. Both socialist and mixed economies
 - 2. Mixed and capitalist economies
 - 3. Capitalist economies only
 - 4. Both capitalist and socialist economies

Question ID : 264330111738

Option 1 ID : 264330439039

Option 2 ID : 264330439037

Option 3 ID : 264330439038

Option 4 ID : 264330439040

Status : Answered

Chosen Option : 4

Q.26 What is the average sea level pressure, according to meteorologists?

- Ans 1. 1013 mb
 2. 1000 mb
 3. 1030 mb
 4. 870 mb

Question ID : 264330141729
Option 1 ID : 264330555236
Option 2 ID : 264330555237
Option 3 ID : 264330555238
Option 4 ID : 264330555235
Status : Answered
Chosen Option : 3

Q.27 For the year 2011-12, the poverty line for a person was fixed at _____ per month for the rural areas.

- Ans 1. ₹915
 2. ₹850
 3. ₹970
 4. ₹816

Question ID : 264330183046
Option 1 ID : 264330717918
Option 2 ID : 264330717917
Option 3 ID : 264330717919
Option 4 ID : 264330717916
Status : Answered
Chosen Option : 1

Q.28 Which of the following countries was the host of the first Asian games in 1951?

- Ans 1. China
 2. Saudi Arabia
 3. Japan
 4. India

Question ID : 264330144211
Option 1 ID : 264330565105
Option 2 ID : 264330565106
Option 3 ID : 264330565104
Option 4 ID : 264330565103
Status : Answered
Chosen Option : 1

Q.29 In which of the following years did the Swadeshi movement take place to oppose the partition of Bengal?

- Ans 1. 1905
 2. 1910
 3. 1907
 4. 1909

Question ID : 264330118604
Option 1 ID : 264330465669
Option 2 ID : 264330465667
Option 3 ID : 264330465668
Option 4 ID : 264330465670
Status : Answered
Chosen Option : 1

Q.30 Kirti Kisan Party (KKP) was established on _____ at Amritsar.

- Ans
- 1. 7th February 1927
 - 2. 13th March 1927
 - 3. 12th April 1927
 - 4. 10th May 1927

Question ID : 264330166874
Option 1 ID : 264330654531
Option 2 ID : 264330654532
Option 3 ID : 264330654533
Option 4 ID : 264330654534
Status : Answered
Chosen Option : 2

Q.31 Match list I to list II.

List I	List II
a) Nationalisation of 14 banks	i) 1982
b) Dr Manmohan Singh appointed the governor of RBI	ii) 1978
c) Demonetisation of ₹10,000 bank notes	iii) 1969

- Ans
- 1. a-i, b-iii, c-ii
 - 2. a-ii, b-i, c-iii
 - 3. a-iii, b-i, c-ii
 - 4. a-i, b-ii, c-iii

Question ID : 264330141476
Option 1 ID : 264330554240
Option 2 ID : 264330554242
Option 3 ID : 264330554239
Option 4 ID : 264330554241
Status : Answered
Chosen Option : 3

Q.32 What is the slogan or tagline of the 'Swachh Bharat Mission' celebrated every year on 2 October?

- Ans
- 1. Ek Kadam Swachhata Ki Ore
 - 2. Ek Kadam Safai Ki Ore
 - 3. Ek Kadam Paryavaran Ki Ore
 - 4. Ek Kadam Sundarta Ki Ore

Question ID : 264330111148
Option 1 ID : 264330436677
Option 2 ID : 264330436678
Option 3 ID : 264330436680
Option 4 ID : 264330436679
Status : Answered
Chosen Option : 1

Q.33 Vikram Era starts from which of the following years?

- Ans 1. 68 BC
 2. 78 BC
 3. 57 BC
 4. 78 AD

Question ID : 264330134585
Option 1 ID : 264330527298
Option 2 ID : 264330527295
Option 3 ID : 264330527297
Option 4 ID : 264330527296
Status : Answered
Chosen Option : 4

Q.34 Jhijhiya, a famous folk dance performed by women during Navratri, is a popular festival in which of the following states?

- Ans 1. Gujarat
 2. Bihar
 3. Uttar Pradesh
 4. Rajasthan

Question ID : 264330110426
Option 1 ID : 264330433981
Option 2 ID : 264330433984
Option 3 ID : 264330433983
Option 4 ID : 264330433982
Status : Answered
Chosen Option : 1

Q.35 According to the Census of India 2011, which Union Territory of India recorded the lowest population?

- Ans 1. Lakshadweep
 2. Puducherry
 3. Dadra and Nagar Haveli
 4. Daman and Diu

Question ID : 264330120477
Option 1 ID : 264330472161
Option 2 ID : 264330472162
Option 3 ID : 264330472159
Option 4 ID : 264330472160
Status : Answered
Chosen Option : 1

Q.36 Which river is bounded by Tungabhadra sub-basin of Krishna basin in the northern side and Palar sub-basin in the southern side?

- Ans 1. Mahanadi Basin
 2. Brahmani Basin
 3. Cauvery Basin
 4. Tapi Basin

Question ID : 264330131024
Option 1 ID : 264330513210
Option 2 ID : 264330513208
Option 3 ID : 264330513209
Option 4 ID : 264330513207
Status : Answered
Chosen Option : 3

Q.37 Which of the following Articles of the Indian Constitution is related with providing a living wage, conditions of work ensuring a decent standard of life and full enjoyment of leisure and social and cultural opportunities by the state?

- Ans 1. Article 43
 2. Article 44
 3. Article 42
 4. Article 45

Question ID : 264330180059
Option 1 ID : 264330706220
Option 2 ID : 264330706221
Option 3 ID : 264330706219
Option 4 ID : 264330706222
Status : Answered
Chosen Option : 1

Q.38 In the Indian Constitution, the Concept of Concurrent list was borrowed from the Constitution of _____.

- Ans 1. Japan
 2. Australia
 3. Spain
 4. Portugal

Question ID : 264330134564
Option 1 ID : 264330527214
Option 2 ID : 264330527211
Option 3 ID : 264330527213
Option 4 ID : 264330527212
Status : Answered
Chosen Option : 2

Q.39 Identify the word that means the minimum distance at which objects can be seen most distinctly without strain.

- Ans 1. Least distant of distance vision
 2. Most distance of distant vision
 3. Focal length
 4. Least distance of distinct vision

Question ID : 264330137300
Option 1 ID : 264330537830
Option 2 ID : 264330537829
Option 3 ID : 264330537827
Option 4 ID : 264330537828
Status : Answered
Chosen Option : 4

Q.40 A football match cannot be started if either team consists of fewer than _____ players.

- Ans
- 1. 10
 - 2. 6
 - 3. 9
 - 4. 7

Question ID : 264330118908
Option 1 ID : 264330466289
Option 2 ID : 264330466287
Option 3 ID : 264330466290
Option 4 ID : 264330466288
Status : Answered
Chosen Option : 1

Q.41 प्राचीन और मध्यकालीन भारत में अक्सर देवी से संबंधित पूजा का एक रूप, जिसमें अभ्यासी अक्सर कर्मकांड के संदर्भ में जाति और वर्ग के अंतर को नजरअंदाज कर देते थे, _____ के रूप में जाना जाता था।

- Ans
- 1. शैव
 - 2. पौराणिक
 - 3. मंत्रिक
 - 4. तांत्रिक

Question ID : 264330118968
Option 1 ID : 264330466527
Option 2 ID : 264330466529
Option 3 ID : 264330466528
Option 4 ID : 264330466530
Status : Answered
Chosen Option : 4

Q.42 As per the Regulating Act of 1773, where was the first Supreme Court as a Court of Record established in India?

- Ans
- 1. Bombay
 - 2. Calcutta
 - 3. Delhi
 - 4. Madras

Question ID : 26433069885
Option 1 ID : 264330274045
Option 2 ID : 264330274046
Option 3 ID : 264330274044
Option 4 ID : 264330274047
Status : Answered
Chosen Option : 2

Q.43 जल जलाशय, बांध और तटबंध किस हड़प्पा स्थल पर पाए गए थे?

- Ans
- 1. सुरकोटडा
 - 2. मेहरगढ़
 - 3. धोलावीरा
 - 4. रोपड़

Question ID : 26433086594
Option 1 ID : 264330340019
Option 2 ID : 264330340020
Option 3 ID : 264330340017
Option 4 ID : 264330340018
Status : Answered
Chosen Option : 3

Q.44 Article 50 of the Constitution of India mentions about _____.

- Ans
- 1. promotion of international peace and security
 - 2. securing the right to adequate means of livelihood
 - 3. promoting equal justice and providing free legal aid
 - 4. separation of Judiciary from Executive in public services

Question ID : 264330130453
Option 1 ID : 264330510924
Option 2 ID : 264330510925
Option 3 ID : 264330510926
Option 4 ID : 264330510923
Status : Answered
Chosen Option : 4

Q.45 Which of the following novels of Shashi Tharoor is a satirical verse on the epic Mahabharata?

- Ans
- 1. Why I Am A Hindu
 - 2. The Hindu Way: An Introduction to Hinduism
 - 3. The Great Indian Novel
 - 4. Tharoorosaurus

Question ID : 264330112868
Option 1 ID : 264330443557
Option 2 ID : 264330443560
Option 3 ID : 264330443559
Option 4 ID : 264330443558
Status : Answered
Chosen Option : 3

Q.46 Which of the following groups contains only abiotic elements of an ecosystem?

- Ans
- 1. Rainfall, grass, insects, and frogs
 - 2. Soil, grasses, flowers, and honeybees
 - 3. Soil, minerals, grass, and flowers
 - 4. Soil, minerals, wind, and rainfall

Question ID : 264330177332
Option 1 ID : 264330695519
Option 2 ID : 264330695521
Option 3 ID : 264330695520
Option 4 ID : 264330695522
Status : Answered
Chosen Option : 3

Q.47 The climate of India is referred to as:

- Ans
- 1. Alpine Climate
 - 2. Arctic Climate
 - 3. Tundra Climate
 - 4. Monsoon

Question ID : 264330174345
Option 1 ID : 264330683801
Option 2 ID : 264330683800
Option 3 ID : 264330683799
Option 4 ID : 264330683802
Status : Answered
Chosen Option : 1

Q.48 Who among the following is a famous veena player?

- Ans
- 1. Gopal Das
 - 2. N. Rajam
 - 3. Sultan Khan
 - 4. V. Dhannamal

Question ID : 264330112687
Option 1 ID : 264330442835
Option 2 ID : 264330442834
Option 3 ID : 264330442833
Option 4 ID : 264330442836
Status : Answered
Chosen Option : 4

Q.49 Which of the following can be used as a source of energy, when glucose is NOT available in the body?

- Ans
- 1. Carbonic acids
 - 2. Fatty acid
 - 3. Amino acids
 - 4. Lactic acid

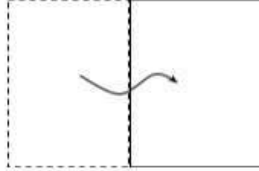
Question ID : 264330120971
Option 1 ID : 264330474099
Option 2 ID : 264330474102
Option 3 ID : 264330474100
Option 4 ID : 264330474101
Status : Answered
Chosen Option : 3

Q.50 In the year 2022, a kho-kho league was started with the name:

- Ans
- 1. Reliance Kho-Kho League
 - 2. Diamond Kho-Kho League
 - 3. Ultimate Kho-Kho League
 - 4. Pro Kho-Kho League

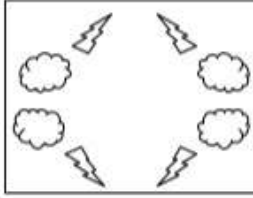
Question ID : 264330118466
Option 1 ID : 264330465267
Option 2 ID : 264330465266
Option 3 ID : 264330465268
Option 4 ID : 264330465265
Status : Answered
Chosen Option : 1

Q.1 एक कागज को नीचे दिखाए अनुसार मोड़ा और काटा गया है। कागज को खोलने पर यह कैसा दिखाई देगा?




Ans

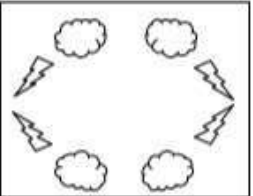
✓ 1.



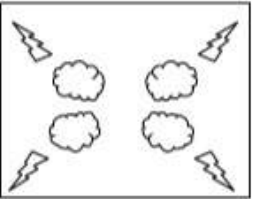
✗ 2.



✗ 3.



✗ 4.



Question ID : 264330118713

Option 1 ID : 264330466105

Option 2 ID : 264330466104

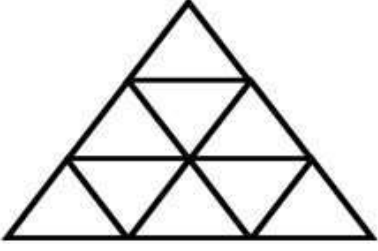
Option 3 ID : 264330466106

Option 4 ID : 264330466103

Status : Answered

Chosen Option : 1

Q.2 दी गई आकृति में कितने त्रिभुज हैं?



- Ans
- 1. 11
 - 2. 10
 - 3. 13
 - 4. 12

Question ID : 26433080665

Option 1 ID : 264330316594

Option 2 ID : 264330316595

Option 3 ID : 264330316596

Option 4 ID : 264330316593

Status : Answered

Chosen Option : 3

Q.3 एक निश्चित कूट भाषा में, 'north by west' को 'times are hard' के रूप में कूटबद्ध किया जाता है, 'east by south' को 'had good times' के रूप में कूटबद्ध किया जाता है, 'east west axis' को 'had hard try' के रूप में कूटबद्ध किया जाता है और 'north axis' को 'try are' के रूप में कूटबद्ध किया जाता है। शब्द 'north' के लिए कूट क्या होगा?

- Ans
- 1. are
 - 2. try
 - 3. south
 - 4. east

Question ID : 26433082866

Option 1 ID : 264330325300

Option 2 ID : 264330325299

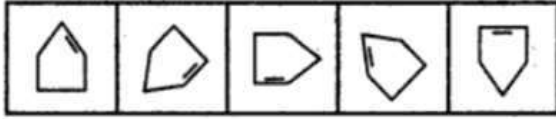
Option 3 ID : 264330325297

Option 4 ID : 264330325298

Status : Answered

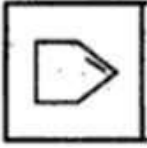
Chosen Option : 1

Q.4 उस आकृति का चयन कीजिए जो निम्नलिखित आकृति श्रृंखला में आगे आएगी।

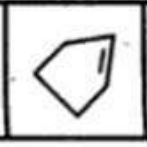


Ans

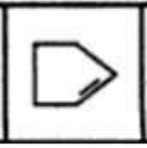
✗ 1.



✓ 2.



✗ 3.



✗ 4.



Question ID : 264330103784

Option 1 ID : 264330407441

Option 2 ID : 264330407444

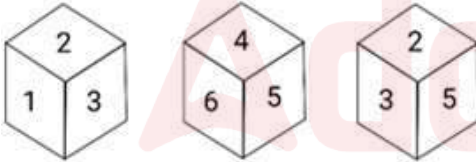
Option 3 ID : 264330407443

Option 4 ID : 264330407442

Status : Answered

Chosen Option : 2

Q.5 एक ही पासे की तीन भिन्न स्थितियों को दर्शाया गया है। संख्या '6' को दर्शाने वाले फलक के विपरीत फलक की संख्या ज्ञात कीजिए।



Ans ✗ 1. 1

✗ 2. 5

✗ 3. 4

✓ 4. 3

Question ID : 264330116956

Option 1 ID : 264330459905

Option 2 ID : 264330459908

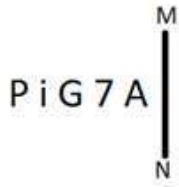
Option 3 ID : 264330459907

Option 4 ID : 264330459906

Status : Answered

Chosen Option : 4

Q.6 यदि दर्पण को नीचे दिखाए गए अनुसार MN पर रखा जाए, तो दी गई आकृति के सही दर्पण प्रतिबिंब का चयन कीजिए।



Ans

1. A Z G i P

2. P i G 7 A

3. A Z G i P

4. A Z G i P

Question ID : 264330166663

Option 1 ID : 264330653694

Option 2 ID : 264330653692

Option 3 ID : 264330653691

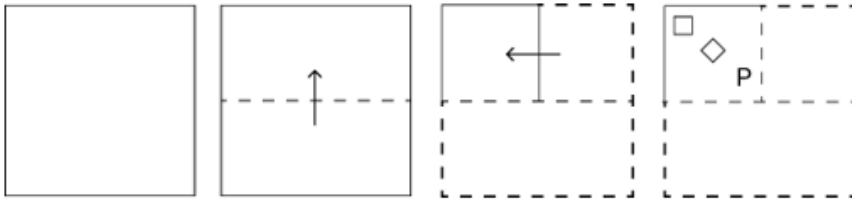
Option 4 ID : 264330653693

Status : Answered

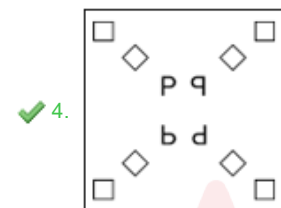
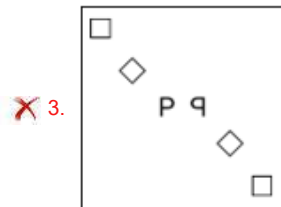
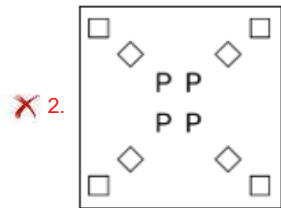
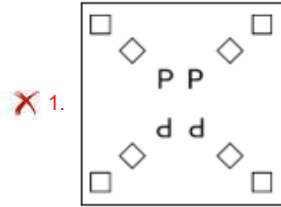
Chosen Option : 3



Q.7 कागज की एक वर्गाकार शीट को बिंदीदार रेखा के अनुदिश दिखाए गए निर्देशों के अनुसार क्रमिक रूप से मोड़ा जाता है और फिर अंत में इसे छिद्रित किया जाता है। कागज को खोलने पर यह कैसा दिखेगा?



Ans



Adda247

Question ID : 264330172428
 Option 1 ID : 264330676263
 Option 2 ID : 264330676266
 Option 3 ID : 264330676264
 Option 4 ID : 264330676265
 Status : Answered
 Chosen Option : 4

Q.8 दिए गए कथनों और निष्कर्षों को ध्यानपूर्वक पढ़ें। यह मानते हुए कि कथनों में दी गई जानकारी सत्य है, भले ही वह सामान्य रूप से ज्ञात तथ्यों से भिन्न प्रतीत होती हो, तय करें कि दिए गए निष्कर्षों में से कौन-सा/से निष्कर्ष कथनों का तार्किक रूप से अनुसरण करता है / करते हैं।

कथन:

कुछ चूहे, चमगादड़ हैं।

कुछ चमगादड़, बिल्लियाँ हैं।

निष्कर्ष:

I. सभी बिल्लियाँ, चूहे हैं।

II. कुछ चमगादड़, चूहे हैं।

Ans

- ✓ 1. केवल निष्कर्ष II अनुसरण करता है
- ✗ 2. न तो निष्कर्ष I अनुसरण करता है और न ही II अनुसरण करता है
- ✗ 3. निष्कर्ष I और II दोनों अनुसरण करते हैं
- ✗ 4. केवल निष्कर्ष I अनुसरण करता है

Question ID : 26433068289

Option 1 ID : 264330267669

Option 2 ID : 264330267671

Option 3 ID : 264330267670

Option 4 ID : 264330267668

Status : Answered

Chosen Option : 1

Q.9 उस विकल्प का चयन करें जो तीसरे शब्द से उसी प्रकार संबंधित है, जिस प्रकार दूसरा शब्द पहले शब्द से संबंधित है।

(शब्दों को अर्थपूर्ण हिंदी शब्दों के रूप में माना जाना चाहिए और शब्द में अक्षरों की संख्या/व्यंजनों की संख्या/स्वरों की संख्या के आधार पर उन्हें एक-दूसरे से संबंधित नहीं किया जाना चाहिए)

खिलाड़ी : टीम :: कलाकार : ?

Ans

- ✗ 1. भीड़
- ✗ 2. झुंड
- ✓ 3. मंडली/ दल
- ✗ 4. गिरोह

Question ID : 26433082579

Option 1 ID : 264330324149

Option 2 ID : 264330324151

Option 3 ID : 264330324152

Option 4 ID : 264330324150

Status : Answered

Chosen Option : 3

Q.10 यदि श्रृंखला को जारी रखना हो, तो प्रश्न चिह्न (?) के स्थान पर कौन-सी आकृति आनी चाहिए?

P	L	Z	P	P	Z	3	P	
	3		L		Y		Z	?
↑	Z		3	↑	↑	3	Y	↑

Ans

✗ 1.

↑	Y
	3
	P Z

✗ 2.

P	Y
	3
↑	Z

✓ 3.

P	3
	8
↑	Y

✗ 4.

↑	Y
	8
	P 3

Question ID : 264330130818

Option 1 ID : 264330512386

Option 2 ID : 264330512385

Option 3 ID : 264330512383

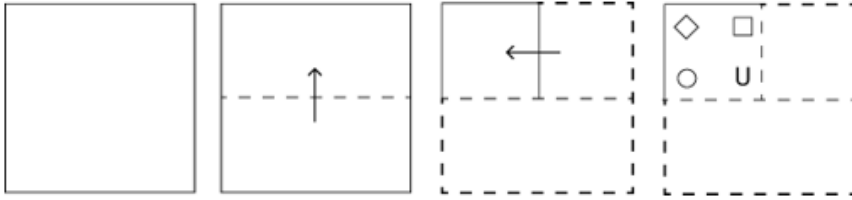
Option 4 ID : 264330512384

Status : Answered

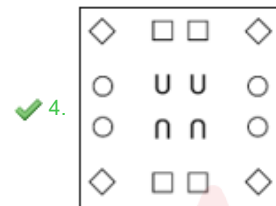
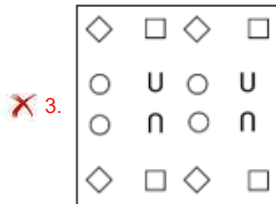
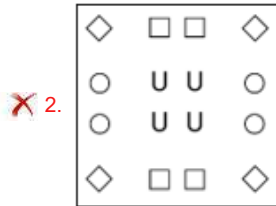
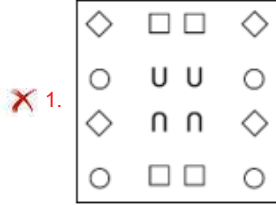
Chosen Option : 2

Adda247

Q.11 कागज की एक वर्गाकार शीट को बिंदीदार रेखा के अनुदिश दिखाए गए निर्देशों के अनुसार क्रमिक रूप से मोड़ा जाता है और फिर अंत में इसे छिद्रित किया जाता है। कागज को खोलने पर यह कैसा दिखेगा?



Ans



Question ID : 264330172424

Option 1 ID : 264330676248

Option 2 ID : 264330676249

Option 3 ID : 264330676250

Option 4 ID : 264330676247

Status : Answered

Chosen Option : 4

Q.12 यदि श्रृंखला को जारी रखना हो, तो प्रश्न चिह्न (?) के स्थान पर कौन-सी आकृति आनी चाहिए?

S	I	C	K	K	B	I	S	T	K	B	I	C	K	T	?
B		3	3		C	C		3	3				B		

Ans

✓ 1.

9	I	C	K
B			3

✗ 2.

T	I	C	K
B			3

✗ 3.

C	K	T	9
B			3

✗ 4.

3	K	C	I
B			T

Question ID : 264330130803

Option 1 ID : 264330512326

Option 2 ID : 264330512323

Option 3 ID : 264330512325

Option 4 ID : 264330512324

Status : Answered

Chosen Option : 2

Q.13 Which two signs should be interchanged to make the following equation correct?

$$16 \div 2 + 54 - 3 \times 2 = 50$$

Ans ✗ 1. + and ×

✗ 2. - and +

✗ 3. - and ×

✓ 4. ÷ and -

Question ID : 264330101075

Option 1 ID : 264330396848

Option 2 ID : 264330396846

Option 3 ID : 264330396847

Option 4 ID : 264330396845

Status : Answered

Chosen Option : 4

Q.14 जब दर्पण को रेखा PQ पर रखा जाता है, तो दी गई आकृति का सही दर्पण

प्रतिबिम्ब ज्ञात कीजिए।



Ans

- ✗ 1. # @ ! # % \ ° e 8 5 3 # \$
- ✗ 2. # @ ! \ ° # e 8 5 3 # \$
- ✗ 3. # @ ! # % \ ° 8 e 5 3 # \$
- ✓ 4. # @ ! # % \ ° e 8 5 3 # \$

Question ID : 26433082026
Option 1 ID : 264330321937
Option 2 ID : 264330321940
Option 3 ID : 264330321939
Option 4 ID : 264330321938
Status : Answered
Chosen Option : 4

Q.15 Rupin, Sunny, Guddu, Shradha, Naveen and Rahul are sitting around a circular table facing each other and sitting opposite to each other. Rupin is between Naveen and Rahul. Naveen is opposite Shradha. Guddu is not the immediate neighbour of Naveen. Who is opposite to Sunny?

- Ans
- ✓ 1. Rahul
 - ✗ 2. Shradha
 - ✗ 3. Rupin
 - ✗ 4. Guddu

Question ID : 26433086247
Option 1 ID : 264330338684
Option 2 ID : 264330338683
Option 3 ID : 264330338681
Option 4 ID : 264330338682
Status : Answered
Chosen Option : 1

Q.16 उस विकल्प का चयन करें जो तीसरे पद से उसी प्रकार संबंधित है जिस प्रकार दूसरा पद पहले पद से संबंधित है और छठा पद पांचवें पद से संबंधित है।
54 : 162 :: 26 : ? :: 88 : 264

- Ans 1. 78
 2. 74
 3. 72
 4. 76

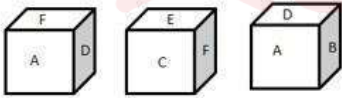
Question ID : 264330102262
Option 1 ID : 264330401516
Option 2 ID : 264330401514
Option 3 ID : 264330401513
Option 4 ID : 264330401515
Status : Answered
Chosen Option : 1

Q.17 यदि 'A' का अर्थ '+' है, 'B' का अर्थ '×' है, 'C' का अर्थ '-' है और 'D' का अर्थ '÷' है, तो निम्नलिखित समीकरण में '?' के स्थान पर क्या आएगा?
55 C 5 A 40 B 2 A 320 D 4 = ?

- Ans 1. 50
 2. 210
 3. 100
 4. 20

Question ID : 26433082477
Option 1 ID : 264330323741
Option 2 ID : 264330323743
Option 3 ID : 264330323744
Option 4 ID : 264330323742
Status : Answered
Chosen Option : 2

Q.18 छह फलकों वाले एक पासे पर 6 वर्णाक्षर क्रमशः A, B, C, D, E और F अंकित हैं। पासे को 3 बार फेंका जाता है और जिन स्थितियों में यह नीचे गिरता है उसे दी गई आकृतियों में दिखाया गया है। वर्णाक्षर B के विपरीत फलक पर अंकित वर्णाक्षर बताएं।



- Ans 1. E
 2. F
 3. D
 4. C

Question ID : 264330110544
Option 1 ID : 264330434455
Option 2 ID : 264330434456
Option 3 ID : 264330434454
Option 4 ID : 264330434453
Status : Answered
Chosen Option : 2

Q.19 दिए गए विकल्पों में से उस संख्या का चयन कीजिए जो निम्नलिखित श्रृंखला में प्रश्न चिह्न (?) के स्थान पर आ सकती है।

3, 4, 6, 10, 18, ?

Ans 1. 34

2. 53

3. 21

4. 56

Question ID : 264330109761

Option 1 ID : 264330431323

Option 2 ID : 264330431324

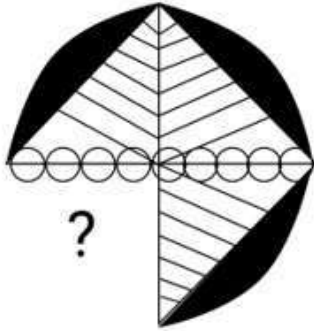
Option 3 ID : 264330431321

Option 4 ID : 264330431322

Status : Answered

Chosen Option : 1

Q.20 दिए गए विकल्पों में से उस आकृति का चयन करें जो पैटर्न पूरा करने के लिए नीचे दी गई आकृति में प्रश्न चिह्न (?) के स्थान पर आएगी।



Ans

1.



2.



3.



4.



Question ID : 264330116614

Option 1 ID : 264330458541

Option 2 ID : 264330458542

Option 3 ID : 264330458544

Option 4 ID : 264330458543

Status : Answered

Chosen Option : 3

Q.21 उस समुच्चय का चयन कीजिए जिसमें संख्याएँ उसी प्रकार संबंधित हैं जिस प्रकार निम्नलिखित समुच्चयों की संख्याएँ एक-दूसरे से संबंधित हैं।
(नोट: संख्याओं को उसके घटक अंकों में विभाजित किए बिना, पूर्ण संख्याओं पर संक्रिया की जानी चाहिए। उदाहरण के लिए 13 - संक्रिया जैसे कि जोड़ना/घटाना/गुणा करना आदि को 13 पर किया जा सकता है। 13 को 1 और 3 में तोड़कर और फिर 1 और 3 पर गणितीय संक्रियाएँ करने की अनुमति नहीं है)
(5, 7, 17)
(7, 13, 29)

- Ans 1. (4, 11, 19)
 2. (15, 27, 51)
 3. (11, 25, 53)
 4. (9, 15, 33)

Question ID : 26433052096

Option 1 ID : 264330203686

Option 2 ID : 264330203687

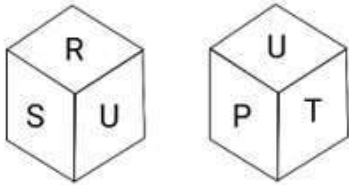
Option 3 ID : 264330203689

Option 4 ID : 264330203688

Status : Not Attempted and Marked For Review

Chosen Option : --

Q.22 एक पासे के अलग - अलग फलकों पर छह अक्षर P, Q, R, S, T और U लिखे गए हैं। इस पासे की दो स्थितियाँ दी गई आकृति में दिखाई गई हैं। P अक्षर वाले फलक के विपरीत फलक पर अक्षर ज्ञात कीजिए।



- Ans 1. T
 2. Q
 3. S
 4. R

Question ID : 264330106169

Option 1 ID : 264330416978

Option 2 ID : 264330416979

Option 3 ID : 264330416977

Option 4 ID : 264330416980

Status : Answered

Chosen Option : 2

Q.23 निम्नलिखित में से कौन-सा अक्षर समूह दी गई श्रृंखला में प्रश्न चिह्न (?) के स्थान पर आएगा और श्रृंखला को तार्किक रूप से पूर्ण करेगा?
NOM, KMP, HKS, EIV, ?

- Ans 1. CGX
 2. BHY
 3. BGY
 4. BGX

Question ID : 264330102229

Option 1 ID : 264330401384

Option 2 ID : 264330401381

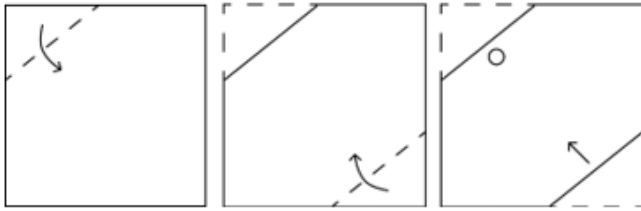
Option 3 ID : 264330401383

Option 4 ID : 264330401382

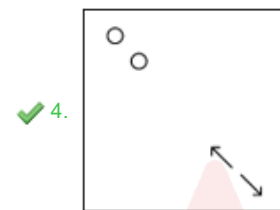
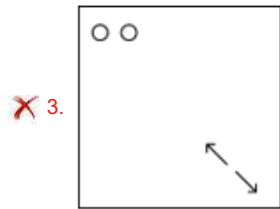
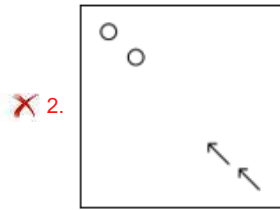
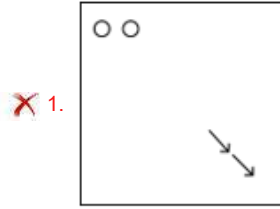
Status : Answered

Chosen Option : 3

Q.24 कागज की एक वर्गाकार शीट को बिंदीदार रेखा के अनुदिश दिखाए गए निर्देशों के अनुसार क्रमिक रूप से मोड़ा जाता है और फिर अंत में इसे छिद्रित किया जाता है। कागज को खोलने पर यह कैसा दिखेगा?



Ans



Question ID : 264330172438

Option 1 ID : 264330676306

Option 2 ID : 264330676303

Option 3 ID : 264330676305

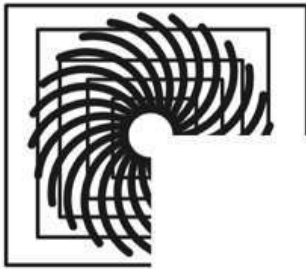
Option 4 ID : 264330676304

Status : Answered

Chosen Option : 4

Q.25 निम्नलिखित में से कौन-सी विकल्प आकृति नीचे दी गई आकृति के स्वरूप

(पैटर्न) को पूरा करेगी?



Ans

✗ 1.



✗ 2.



✓ 3.



✗ 4.



Question ID : 26433080628
Option 1 ID : 264330316447
Option 2 ID : 264330316445
Option 3 ID : 264330316446
Option 4 ID : 264330316448

Status : Answered

Chosen Option : 3

Section : Numerical Ability

Q.1 Find the total surface area of a solid right circular cylinder whose radius and height are 7 cm and 12 cm, respectively. (Use $\pi = \frac{22}{7}$)

Ans ✗ 1. 782 cm²

✓ 2. 836 cm²

✗ 3. 720 cm²

✗ 4. 814 cm²

Question ID : 264330111498
Option 1 ID : 264330438078
Option 2 ID : 264330438080
Option 3 ID : 264330438077
Option 4 ID : 264330438079

Status : Not Answered

Chosen Option : --

Q.2 What is the compound interest on ₹3,90,625 in 2 years at 8% per annum compounded half-yearly?

- Ans
- 1. ₹66,351
 - 2. ₹66,348
 - 3. ₹66,345
 - 4. ₹66,350

Question ID : 264330106008
Option 1 ID : 264330416333
Option 2 ID : 264330416335
Option 3 ID : 264330416336
Option 4 ID : 264330416334
Status : Answered
Chosen Option : 3

Q.3 What percentage decrease in salaries would exactly cancel out a 30% increase?

- Ans
- 1. $22\frac{2}{13}\%$
 - 2. $23\frac{1}{13}\%$
 - 3. $21\frac{2}{13}\%$
 - 4. $24\frac{1}{13}\%$

Question ID : 264330129396
Option 1 ID : 264330506952
Option 2 ID : 264330506951
Option 3 ID : 264330506950
Option 4 ID : 264330506953
Status : Answered
Chosen Option : 2

Q.4 In a certain examination, Prabhu and Raghu secured marks in the ratio of 7 : 8. Whereas Raghu and Raghav secured marks in the ratio of 5 : 4. Find the ratio of the marks obtained by Prabhu and Raghav.

- Ans
- 1. 39 : 35
 - 2. 35 : 39
 - 3. 32 : 35
 - 4. 35 : 32

Question ID : 264330109252
Option 1 ID : 264330429288
Option 2 ID : 264330429286
Option 3 ID : 264330429287
Option 4 ID : 264330429285
Status : Answered
Chosen Option : 4

Q.5 $\frac{(231 + 19)^2 + (231 - 19)^2}{(231 \times 231 + 19 \times 19)}$ का मान ज्ञात करें।

- Ans 1. 2
 2. 250
 3. 212
 4. 62500

Question ID : 264330104151
Option 1 ID : 264330408907
Option 2 ID : 264330408905
Option 3 ID : 264330408908
Option 4 ID : 264330408906
Status : Answered
Chosen Option : 3

Q.6 1, 2, 4, 5, 6, 9, 11 और 18 का औसत क्या है?

- Ans 1. 8
 2. 7
 3. 9
 4. 6

Question ID : 264330130906
Option 1 ID : 264330512735
Option 2 ID : 264330512736
Option 3 ID : 264330512738
Option 4 ID : 264330512737
Status : Answered
Chosen Option : 2

Q.7 A car dealer offers a 15% discount on a car marked at ₹5,00,000, while another dealer gives a discount of 12% on the first ₹3,00,000 and 6% on the next ₹2,00,000 on the same car along with accessories worth ₹6,000 as gift to his customers. What is the difference between the selling prices (in ₹) offered by the two car dealers?

- Ans 1. 21,000
 2. 33,000
 3. 27,000
 4. 39,000

Question ID : 264330183839
Option 1 ID : 264330721032
Option 2 ID : 264330721033
Option 3 ID : 264330721034
Option 4 ID : 264330721035
Status : Answered
Chosen Option : 1

Q.8 There are five prime numbers written in ascending order. The product of the first four is 6545 and that of the last four is 24871. What is the last prime number?

- Ans
- 1. 29
 - 2. 17
 - 3. 19
 - 4. 23

Question ID : 264330104282
Option 1 ID : 264330409432
Option 2 ID : 264330409429
Option 3 ID : 264330409430
Option 4 ID : 264330409431
Status : Not Answered
Chosen Option : --

Q.9 1200 पुरुषों के एक सैन्य दुर्ग में पास 15 दिनों के लिए खाद्य पदार्थ है। यदि सैन्य दुर्ग में पुरुषों की संख्या में 1800 की वृद्धि कर दी जाए, तो खाद्य पदार्थ कितने समय तक चलेगा?

- Ans
- 1. 9 दिन
 - 2. 12 दिन
 - 3. 6 दिन
 - 4. 10 दिन

Question ID : 264330182580
Option 1 ID : 264330716112
Option 2 ID : 264330716114
Option 3 ID : 264330716111
Option 4 ID : 264330716113
Status : Answered
Chosen Option : 4

Q.10 90 कलमों को बेचने पर एक दुकानदार को 30 कलमों के विक्रय मूल्य के बराबर लाभ होता है। उसका लाभ प्रतिशत ज्ञात करें।

- Ans
- 1. 40%
 - 2. 70%
 - 3. 60%
 - 4. 50%

Question ID : 264330104500
Option 1 ID : 264330410302
Option 2 ID : 264330410304
Option 3 ID : 264330410301
Option 4 ID : 264330410303
Status : Answered
Chosen Option : 4

Q.11 देवेंद्र प्रतिदिन सुबह 8:25 बजे अपने घर से निकलता है और सुबह 9: 55 पर कार्यालय पहुँचता है। एक दिन वह अपने घर से सुबह 8:25 बजे निकलता है, लेकिन सामान्य चाल के $\frac{6}{7}$ पर कुल दूरी की $\frac{3}{10}$ दूरी तय करता है और बाकी की दूरी सामान्य चाल के $\frac{7}{6}$ पर तय करता है। देवेंद्र उस दिन कितने बजे कार्यालय पहुँचता है?

- Ans
- 1. 9:50:40 पूर्वाह्न
 - 2. 9:50:30 पूर्वाह्न
 - 3. 9:50:50 पूर्वाह्न
 - 4. 9:50:20 पूर्वाह्न

Question ID : 264330112551
Option 1 ID : 264330442291
Option 2 ID : 264330442289
Option 3 ID : 264330442290
Option 4 ID : 264330442292
Status : Not Answered
Chosen Option : --

Q.12 The LCM of two co-prime numbers is 667 and one of the numbers is 23. What is the other number?

- Ans
- 1. 31
 - 2. 19
 - 3. 29
 - 4. 25

Question ID : 264330111452
Option 1 ID : 264330437896
Option 2 ID : 264330437895
Option 3 ID : 264330437894
Option 4 ID : 264330437893
Status : Answered
Chosen Option : 3

Q.13 एक कर्मचारी के वेतन में पहले 45% की वृद्धि की जाती है और फिर 45% की कमी की जाती है। उसके वेतन में प्रभावी परिवर्तन की गणना करें।

- Ans
- 1. 22.50% कमी
 - 2. 20.25% कमी
 - 3. 20.25% वृद्धि
 - 4. 22.50% वृद्धि

Question ID : 264330126506
Option 1 ID : 264330495697
Option 2 ID : 264330495699
Option 3 ID : 264330495698
Option 4 ID : 264330495696
Status : Answered
Chosen Option : 2

Q.14 The edges of a triangular board are 12 m, 35 m and 37 m. Find the cost of painting it at the rate of ₹ 8/m².

- Ans
- 1. ₹1,560
 - 2. ₹1,670
 - 3. ₹1,680
 - 4. ₹1,575

Question ID : 264330118431
Option 1 ID : 264330465125
Option 2 ID : 264330465126
Option 3 ID : 264330465128
Option 4 ID : 264330465127
Status : Not Answered
Chosen Option : --

Q.15 A certain sum doubles in 5 years at simple interest. The same sum under the same interest rate will become six times in:

- Ans
- 1. 21 years
 - 2. 24 years
 - 3. 27 years
 - 4. 25 years

Question ID : 264330119931
Option 1 ID : 264330469999
Option 2 ID : 264330470000
Option 3 ID : 264330470002
Option 4 ID : 264330470001
Status : Answered
Chosen Option : 4

Section : Computer Proficiency

Q.1 What is one of the purpose of 'Print Preview' in formatting MS Word 365 documents?

- Ans
- 1. To automatically correct spelling and grammar errors
 - 2. To convert the document to a different file format
 - 3. To create a digital backup of the document
 - 4. To adjust page layout and formatting before printing

Question ID : 264330178581
Option 1 ID : 264330700354
Option 2 ID : 264330700353
Option 3 ID : 264330700352
Option 4 ID : 264330700351
Status : Answered
Chosen Option : 4

Q.2 In MS Excel 365, Which feature in Microsoft Excel is used to visually represent data through graphical representation?

- Ans
- 1. Macro
 - 2. Charts
 - 3. Formula
 - 4. PivotTable

Question ID : 264330180686
Option 1 ID : 264330708713
Option 2 ID : 264330708712
Option 3 ID : 264330708714
Option 4 ID : 264330708711
Status : Answered
Chosen Option : 2

Q.3 What is the purpose of the CC field in an email?

- Ans
- 1. It stands for 'Carbon Copy' and is used to include additional recipients who should be informed about the email.
 - 2. It stands for 'Copy Contents' and is used to copy and paste text into the email.
 - 3. It stands for 'Closed Captioning' and is used to add subtitles to the email.
 - 4. It stands for 'Courtesy Copy' and is used to send a polite message along with the email.

Question ID : 264330173549
Option 1 ID : 264330680675
Option 2 ID : 264330680678
Option 3 ID : 264330680676
Option 4 ID : 264330680677
Status : Answered
Chosen Option : 1

Q.4 Which of the following keyboard shortcuts is used to open a new, blank document in Microsoft Word 365?

- Ans
- 1. Ctrl + N
 - 2. Ctrl + S
 - 3. Ctrl + P
 - 4. Ctrl + O

Question ID : 264330180720
Option 1 ID : 264330708847
Option 2 ID : 264330708849
Option 3 ID : 264330708850
Option 4 ID : 264330708848
Status : Answered
Chosen Option : 1

Q.5 What is the purpose of applying shading to a table in Microsoft Word 365?

- Ans
- 1. To sort the data in the table
 - 2. To adjust the column widths in the table
 - 3. To change the font colour within the table
 - 4. To highlight specific cells or rows in the table

Question ID : 264330174499
Option 1 ID : 264330684418
Option 2 ID : 264330684417
Option 3 ID : 264330684415
Option 4 ID : 264330684416
Status : Answered
Chosen Option : 4

Q.6 In MS Excel 365 which of the following is the correct sequence for inserting a row above a given row in MS-Excel spreadsheet?

- Ans
- 1. Select the cell<<Right click<<Insert<<Entire Row
 - 2. Select the cell<<Left click<<Insert<<Entire Row
 - 3. Select the cell<<Left click<<Insert<<Entire Column
 - 4. Select the cell<<Right click<<Insert<<Entire Column

Question ID : 264330176697
Option 1 ID : 264330693004
Option 2 ID : 264330693006
Option 3 ID : 264330693005
Option 4 ID : 264330693003
Status : Answered
Chosen Option : 2

Q.7 What is the file extension to save a document in MS Word 2003?

- Ans
- 1. .docx
 - 2. .doc
 - 3. .odt
 - 4. .xls

Question ID : 264330180438
Option 1 ID : 264330707720
Option 2 ID : 264330707719
Option 3 ID : 264330707721
Option 4 ID : 264330707722
Status : Answered
Chosen Option : 2

Q.8 Which of the following is the correct full form of VOIP?

- Ans
- 1. Voice over internet protocol
 - 2. Volume over internet protocol
 - 3. Voice of intranet protocol
 - 4. Voice over intranet protocol

Question ID : 264330176677
Option 1 ID : 264330692925
Option 2 ID : 264330692926
Option 3 ID : 264330692923
Option 4 ID : 264330692924
Status : Answered
Chosen Option : 1

Q.9 Which of the following statements related to addressing of cells in MS Excel is **INCORRECT**?

- Ans**
- 1. The cell in the second column and third row is B3.
 - 2. Columns in MS Excel are identified by numbers.
 - 3. The cell in the first column and first row is A1.
 - 4. Rows in MS Excel are identified by numbers.

Question ID : **264330180810**

Option 1 ID : **264330709204**

Option 2 ID : **264330709206**

Option 3 ID : **264330709203**

Option 4 ID : **264330709205**

Status : **Answered**

Chosen Option : **4**

Q.10 Which of the following options within the Table group of the Insert tab is used to place a table in an MS Word 365 document?

- Ans**
- 1. Table
 - 2. Cut
 - 3. Paste
 - 4. Copy

Question ID : **264330178585**

Option 1 ID : **264330700370**

Option 2 ID : **264330700367**

Option 3 ID : **264330700369**

Option 4 ID : **264330700368**

Status : **Answered**

Chosen Option : **1**

Adda247

Constable Executive Male and Female in Delhi Police Examination 2023

Roll Number	
Candidate Name	
Venue Name	ION Digital Zone Ganga Nagar Meerut
Exam Date	03/12/2023
Exam Time	3:00 PM - 4:30 PM
Subject	Constable Executive Male and Female in Delhi Police Examination 2023

Section : General Knowledge

Q.1 Who among the following was NOT a gold medallist at the Commonwealth Games-2022?

- Ans
- 1. Naveen Kumar
 - 2. Ravi Dahiya
 - 3. Pooja Gehlot
 - 4. Vinesh Phogat

Question ID : 264330113737
Option 1 ID : 264330447034
Option 2 ID : 264330447033
Option 3 ID : 264330447036
Option 4 ID : 264330447035
Status : Not Answered
Chosen Option : --

Q.2 WACA Cricket Ground is located in _____.

- Ans
- 1. Mumbai
 - 2. Perth
 - 3. London
 - 4. Sydney

Question ID : 264330110372
Option 1 ID : 264330433766
Option 2 ID : 264330433767
Option 3 ID : 264330433765
Option 4 ID : 264330433768
Status : Not Answered
Chosen Option : --

Q.3 The mob-burning of a police station in Chauri Chaura in 1922 brought about the end of the Non-Cooperation Movement. In which present-day state is Chauri Chaura located?

- Ans
- 1. Bihar
 - 2. Punjab
 - 3. Haryana
 - 4. Uttar Pradesh

Question ID : 264330118998
Option 1 ID : 264330466649
Option 2 ID : 264330466647
Option 3 ID : 264330466648
Option 4 ID : 264330466650
Status : Answered
Chosen Option : 4

Q.4 What is the general circulation of the atmosphere?

- Ans
- 1. The pattern of the movement of the surface winds.
 - 2. The pattern of the movement of the planetary winds.
 - 3. The pattern of the movement of the water.
 - 4. The pattern of the movement of the energy.

Question ID : 264330116377
Option 1 ID : 264330457596
Option 2 ID : 264330457595
Option 3 ID : 264330457594
Option 4 ID : 264330457593
Status : Answered
Chosen Option : 1

Q.5 The term 'secular' was added to the Preamble of the Constitution of India by the 42nd Constitutional Amendment Act in the year _____.

- Ans
- 1. 1978
 - 2. 1975
 - 3. 1974
 - 4. 1976

Question ID : 264330130431
Option 1 ID : 264330510838
Option 2 ID : 264330510836
Option 3 ID : 264330510835
Option 4 ID : 264330510837
Status : Answered
Chosen Option : 4

Q.6 During the Mughal period, what were the farmers called who cultivate their own land?

- Ans
- 1. Zamindar
 - 2. Muzarain
 - 3. Khud kashta
 - 4. Pahi Kasht

Question ID : 264330120426
Option 1 ID : 264330471955
Option 2 ID : 264330471958
Option 3 ID : 264330471956
Option 4 ID : 264330471957
Status : Not Answered
Chosen Option : --

Q.7 In which of the following sessions of the Indian National Congress was the demand for 'Swaraj' put forward for the first time?

- Ans
- 1. Calcutta
 - 2. Bombay
 - 3. Bankipur
 - 4. Karachi

Question ID : 264330114859
Option 1 ID : 264330451522
Option 2 ID : 264330451523
Option 3 ID : 264330451524
Option 4 ID : 264330451521
Status : Answered
Chosen Option : 4

Q.8 Tippi is a well-known dance of which of the following states?

- Ans
- 1. Gujarat
 - 2. Punjab
 - 3. Rajasthan
 - 4. Madhya Pradesh

Question ID : 264330110419
Option 1 ID : 264330433955
Option 2 ID : 264330433954
Option 3 ID : 264330433953
Option 4 ID : 264330433956
Status : Answered
Chosen Option : 1

Q.9 Where is the headquarter of the WTO located?

- Ans
- 1. Washington, D.C.
 - 2. New York
 - 3. Rome
 - 4. Geneva

Question ID : 26433097098
Option 1 ID : 264330381092
Option 2 ID : 264330381091
Option 3 ID : 264330381089
Option 4 ID : 264330381090
Status : Answered
Chosen Option : 1

Q.10 Name the first Indian woman who became the President of the Indian National Congress.

- Ans
- 1. Rani Velu Nachiyar
 - 2. Sarojini Naidu
 - 3. Annie Besant
 - 4. Sarala Devi Chaudhurani

Question ID : 264330171709
Option 1 ID : 264330673442
Option 2 ID : 264330673440
Option 3 ID : 264330673439
Option 4 ID : 264330673441
Status : Answered
Chosen Option : 2

Q.11 Which genus of the Rhodophyceae family possesses an erect series of branches and a filamentous prostrate section attached to the substratum by means of unicellular rhizoids?

- Ans
- 1. Polysiphonia
 - 2. Dictyota
 - 3. Laminaria
 - 4. Sargassum

Question ID : 264330130980
Option 1 ID : 264330513033
Option 2 ID : 264330513032
Option 3 ID : 264330513031
Option 4 ID : 264330513034
Status : Answered
Chosen Option : 4

Q.12 Which type of title can be conferred by the state as per Article 18 of the Constitution of India?

- Ans
- 1. Sports and Music
 - 2. Religious and Music
 - 3. Military and Academic
 - 4. Military and Social

Question ID : 264330183151
Option 1 ID : 264330718339
Option 2 ID : 264330718338
Option 3 ID : 264330718337
Option 4 ID : 264330718336
Status : Answered
Chosen Option : 3

Q.13 'Files and Ranks' are used in which of the following games?

- Ans
- 1. Cricket
 - 2. Chess
 - 3. Badminton
 - 4. Hockey

Question ID : 264330132559
Option 1 ID : 264330519331
Option 2 ID : 264330519333
Option 3 ID : 264330519332
Option 4 ID : 264330519334
Status : Answered
Chosen Option : 2

Q.14 The Swaran Singh Committee had suggested the incorporation of a total of _____ Fundamental Duties.

- Ans
- 1. 10
 - 2. 14
 - 3. 13
 - 4. 8

Question ID : 264330114750
Option 1 ID : 264330451087
Option 2 ID : 264330451085
Option 3 ID : 264330451086
Option 4 ID : 264330451088
Status : Answered
Chosen Option : 4

Q.15 Which of the following was/were the limitation(s) of the Green Revolution?

- A. Confined to limited crops
- B. Uneven spread

- Ans
- 1. Only B
 - 2. Neither A nor B
 - 3. Both A and B
 - 4. Only A

Question ID : 264330109113

Option 1 ID : 264330428730

Option 2 ID : 264330428732

Option 3 ID : 264330428731

Option 4 ID : 264330428729

Status : Answered

Chosen Option : 1

Q.16 Up to which financial year has the 'New India Literacy Programme' been launched to impart foundational literacy and numeracy, critical life skills, vocational skills, basic and continuing education?

- Ans
- 1. FY 2027
 - 2. FY 2029
 - 3. FY 2026
 - 4. FY 2025

Question ID : 264330111582

Option 1 ID : 264330438414

Option 2 ID : 264330438416

Option 3 ID : 264330438415

Option 4 ID : 264330438413

Status : Not Answered

Chosen Option : --

Q.17 Which statement gives the details of the estimated revenue and expenditure of the government?

- Ans
- 1. Income statement
 - 2. Balance sheet
 - 3. Annual financial statement
 - 4. Balance of payments

Question ID : 264330120868

Option 1 ID : 264330473690

Option 2 ID : 264330473688

Option 3 ID : 264330473689

Option 4 ID : 264330473687

Status : Answered

Chosen Option : 4

Q.18 A pilot project of linking Self-Help-Groups with banks was launched by NABARD. The success of the pilot project resulted in the introduction of three radical innovations by RBI/NABARD. Which of the following is NOT one of them?

- Ans
- 1. Permission to lend to groups without specification of purpose/activity/project
 - 2. Avoidance of action in the event of defaults
 - 3. Acceptance of informal groups as clients of banks – both, for savings and credit linkage
 - 4. Introduction of collateral-free lending

Question ID : 264330112458

Option 1 ID : 264330441920

Option 2 ID : 264330441919

Option 3 ID : 264330441917

Option 4 ID : 264330441918

Status : Answered

Chosen Option : 1

Q.19 Pandit Ajoy Chakrabarty, who was conferred with Padma Bhushan in 2020, is a veteran vocalist of the _____ Gharana.

- Ans
- 1. Kirana
 - 2. Rangeela
 - 3. Gwalior
 - 4. Patiala

Question ID : 264330112684

Option 1 ID : 264330442821

Option 2 ID : 264330442824

Option 3 ID : 264330442823

Option 4 ID : 264330442822

Status : Answered

Chosen Option : 1

Q.20 Indian Foreign Services and Indian Revenue Services come under which type of Civil Service?

- Ans
- 1. State services
 - 2. Central services
 - 3. Multinational services
 - 4. Federal services

Question ID : 264330158682

Option 1 ID : 264330622088

Option 2 ID : 264330622089

Option 3 ID : 264330622090

Option 4 ID : 264330622087

Status : Answered

Chosen Option : 2

Q.21 Which of the following economic reforms were initiated by the government under their liberalisation policy?

- Ans
- 1. Industrial and agricultural sector reforms
 - 2. Industrial, agricultural and financial sector reforms
 - 3. Industrial and financial sector reforms
 - 4. Agricultural and financial sector reforms

Question ID : 264330110020
Option 1 ID : 264330432360
Option 2 ID : 264330432358
Option 3 ID : 264330432357
Option 4 ID : 264330432359
Status : Answered
Chosen Option : 2

Q.22 Prarthana Samaj was established at Bombay in the year _____.

- Ans
- 1. 1537
 - 2. 1937
 - 3. 1867
 - 4. 1737

Question ID : 264330123750
Option 1 ID : 264330485038
Option 2 ID : 264330485036
Option 3 ID : 264330485035
Option 4 ID : 264330485037
Status : Answered
Chosen Option : 3

Q.23 'A Passage to India', a novel about the British Empire, was written by which of the following authors?

- Ans
- 1. James Joyce
 - 2. Sinclair Lewis
 - 3. Anita Loos
 - 4. EM Forster

Question ID : 26433055375
Option 1 ID : 264330216485
Option 2 ID : 264330216484
Option 3 ID : 264330216486
Option 4 ID : 264330216487
Status : Answered
Chosen Option : 4

Q.24 As per Human Development Report 2021-22, what is the percentage of population under severe multi-dimensional poverty?

- Ans
- 1. 51.3%
 - 2. 8.8%
 - 3. 41.3%
 - 4. 31.3%

Question ID : 264330179559
Option 1 ID : 264330704237
Option 2 ID : 264330704238
Option 3 ID : 264330704235
Option 4 ID : 264330704236
Status : Not Answered
Chosen Option : --

Q.25 The ICAR-Central Institute for Cotton Research is located in _____.

- Ans 1. Hyderabad
 2. Bhopal
 3. Jaipur
 4. Nagpur

Question ID : 264330119880
Option 1 ID : 264330469795
Option 2 ID : 264330469797
Option 3 ID : 264330469796
Option 4 ID : 264330469798
Status : Answered
Chosen Option : 1

Q.26 The terms, 'Aus', 'Aman' and 'Boro', are associated with which crop in West Bengal?

- Ans 1. Maize
 2. Rice
 3. Tea
 4. Wheat

Question ID : 264330180574
Option 1 ID : 264330708264
Option 2 ID : 264330708263
Option 3 ID : 264330708265
Option 4 ID : 264330708266
Status : Answered
Chosen Option : 2

Q.27 Mauryan emperor Ashoka conquered Kalinga, which is currently known as _____.

- Ans 1. Odisha
 2. Bengal
 3. Uttar Pradesh
 4. Bihar

Question ID : 264330118954
Option 1 ID : 264330466471
Option 2 ID : 264330466474
Option 3 ID : 264330466473
Option 4 ID : 264330466472
Status : Answered
Chosen Option : 1

Q.28 Which of the following is NOT a feature of Fundamental Duties?

- Ans 1. They are both, civic and moral in nature.
 2. They emphasize on respecting Indian culture.
 3. They are justiciable.
 4. They are not applicable to foreigners.

Question ID : 264330110569
Option 1 ID : 264330434553
Option 2 ID : 264330434554
Option 3 ID : 264330434555
Option 4 ID : 264330434556
Status : Answered
Chosen Option : 3

Q.29 As per data released by Centre for Monitoring Indian Economy (CMIE) for the month of December 2022, _____ recorded the lowest unemployment at 0.9%.

- Ans
- 1. Odisha
 - 2. Haryana
 - 3. Madhya Pradesh
 - 4. Rajasthan

Question ID : 264330177915
Option 1 ID : 264330697750
Option 2 ID : 264330697747
Option 3 ID : 264330697749
Option 4 ID : 264330697748
Status : Not Answered
Chosen Option : --

Q.30 Which of the following soil varieties is favourable for the growth of mangroves and deltaic vegetation?

- Ans
- 1. Desert soil
 - 2. Fine clay and alluvial soil
 - 3. Black soil
 - 4. Laterite soil

Question ID : 264330178015
Option 1 ID : 264330698135
Option 2 ID : 264330698138
Option 3 ID : 264330698136
Option 4 ID : 264330698137
Status : Answered
Chosen Option : 2

Q.31 Har Ghar Tiranga campaign was launched for which of the following national day celebrations?

- Ans
- 1. Gandhi Jayanti
 - 2. Independence Day
 - 3. Children's Day
 - 4. Republic Day

Question ID : 264330118265
Option 1 ID : 264330464876
Option 2 ID : 264330464875
Option 3 ID : 264330464878
Option 4 ID : 264330464877
Status : Answered
Chosen Option : 2

Q.32 U Srinivas is associated with which musical instrument?

- Ans
- 1. Kanjra
 - 2. Shehnai
 - 3. Violin
 - 4. Mandolin

Question ID : 264330111194
Option 1 ID : 264330436863
Option 2 ID : 264330436861
Option 3 ID : 264330436864
Option 4 ID : 264330436862
Status : Not Answered
Chosen Option : --

Q.33 As of October 2022, which of the following is a Stupa site excavated in the state of Karnataka?

- Ans
- 1. Sanchi
 - 2. Amravati
 - 3. Guntapalle
 - 4. Sannati

Question ID : 264330109628
Option 1 ID : 264330430789
Option 2 ID : 264330430790
Option 3 ID : 264330430792
Option 4 ID : 264330430791
Status : Not Answered
Chosen Option : --

Q.34 Who among the following personalities is associated with Odissi dance?

- Ans
- 1. Surupa Sen
 - 2. Jatin Goswami
 - 3. Yamini Krishnamurthy
 - 4. Ishira Parikh

Question ID : 264330132401
Option 1 ID : 264330518699
Option 2 ID : 264330518701
Option 3 ID : 264330518702
Option 4 ID : 264330518700
Status : Answered
Chosen Option : 4

Q.35 Carbonated beverages contain _____.

- Ans
- 1. N₂
 - 2. O₂
 - 3. CH₄
 - 4. CO₂

Question ID : 264330117615
Option 1 ID : 264330462486
Option 2 ID : 264330462487
Option 3 ID : 264330462488
Option 4 ID : 264330462485
Status : Answered
Chosen Option : 4

Q.36 Consider the following groups of elements:
A: $^{12}_6C$ and $^{14}_6C$ C: $^{40}_{16}S$ and $^{40}_{17}Cl$

B: $^{16}_8O$ and $^{18}_8O$ D: $^{14}_6C$ and $^{14}_7N$

Which of the following identifications regarding the given groups is correct?

- Ans
- 1. Isotopes: A and D
Isobars: B and C
 - 2. Isotopes: A and C
Isobars: B and D
 - 3. Isotopes: A and B
Isobars: C and D
 - 4. Isotopes: C and D
Isobars: A and B

Question ID : 264330177025
Option 1 ID : 264330694296
Option 2 ID : 264330694295
Option 3 ID : 264330694298
Option 4 ID : 264330694297
Status : Answered
Chosen Option : 3

Q.37 What is the full form of 'ICC'?

- Ans
- 1. International Cricket Council
 - 2. Indian Cricket Council
 - 3. International Committee for Cricket
 - 4. Internal Cricket Committee

Question ID : 264330113764
Option 1 ID : 264330447141
Option 2 ID : 264330447142
Option 3 ID : 264330447144
Option 4 ID : 264330447143
Status : Answered
Chosen Option : 1

Q.38 Which of the following is NOT subject to dissolution?

- Ans
- 1. Cabinet
 - 2. Legislative Assembly
 - 3. Legislative Council
 - 4. Council Of Ministers

Question ID : 264330173543
Option 1 ID : 264330680654
Option 2 ID : 264330680651
Option 3 ID : 264330680652
Option 4 ID : 264330680653
Status : Answered
Chosen Option : 3

Q.39 What is the name for the gestures used in Bharatnatyam?

- Ans 1. Laya
 2. Mudras
 3. Tripatakas
 4. Gatakas

Question ID : 264330110414
Option 1 ID : 264330433936
Option 2 ID : 264330433935
Option 3 ID : 264330433933
Option 4 ID : 264330433934
Status : Answered
Chosen Option : 2

Q.40 International Day of Non-violence is marked on which of the following freedom fighter's birth anniversary?

- Ans 1. Lal Bahadur Shastri
 2. BR Ambedkar
 3. Mahatma Gandhi
 4. Jawaharlal Nehru

Question ID : 264330106212
Option 1 ID : 264330417150
Option 2 ID : 264330417151
Option 3 ID : 264330417152
Option 4 ID : 264330417149
Status : Answered
Chosen Option : 3

Q.41 Which substance is fortified with calcium, Vitamin D and Vitamin B12?

- Ans 1. Eggs
 2. Cow's milk
 3. Dark green leafy vegetables
 4. Soy milk

Question ID : 264330134879
Option 1 ID : 264330528454
Option 2 ID : 264330528451
Option 3 ID : 264330528452
Option 4 ID : 264330528453
Status : Answered
Chosen Option : 2

Q.42 Uraiyur, a place famous for cotton, was the political centre (capital) of the:

- Ans 1. Chalukyas
 2. Cholas
 3. Pandyas
 4. Cheras

Question ID : 264330113570
Option 1 ID : 264330446366
Option 2 ID : 264330446368
Option 3 ID : 264330446365
Option 4 ID : 264330446367
Status : Not Answered
Chosen Option : --

Q.43 A court poet of the Gupta period, Harishena, wrote a glowing account of the military exploits of his patron. Who was his patron?

- Ans
- 1. Chandragupta I
 - 2. Kumaragupta I
 - 3. Chandragupta II
 - 4. Samudragupta

Question ID : 264330171667
Option 1 ID : 264330673274
Option 2 ID : 264330673273
Option 3 ID : 264330673272
Option 4 ID : 264330673271
Status : Answered
Chosen Option : 3

Q.44 Matthew Hayden, former Australian cricketer, has written which of the following autobiographies?

- Ans
- 1. At the Close Play
 - 2. Standing My Ground
 - 3. The Test of My Life
 - 4. Playing it My Way

Question ID : 26433055351
Option 1 ID : 264330216389
Option 2 ID : 264330216390
Option 3 ID : 264330216391
Option 4 ID : 264330216388
Status : Answered
Chosen Option : 1

Q.45 Which Act of the Government of India ensures the 'right to work' from the following?

- Ans
- 1. The Employees' Provident Funds and Miscellaneous Provisions Act
 - 2. Citizenship Act
 - 3. Mahatma Gandhi National Rural Employment Guarantee Act
 - 4. Indian Institutes of Management Act

Question ID : 264330182977
Option 1 ID : 264330717640
Option 2 ID : 264330717642
Option 3 ID : 264330717643
Option 4 ID : 264330717641
Status : Answered
Chosen Option : 3

Q.46 Which Article of the Constitution of India consists of the provision for the establishment of the Finance Commission?

- Ans
- 1. Article 280
 - 2. Article 250
 - 3. Article 270
 - 4. Article 260

Question ID : 264330110809
Option 1 ID : 264330435516
Option 2 ID : 264330435515
Option 3 ID : 264330435514
Option 4 ID : 264330435513
Status : Answered
Chosen Option : 1

Q.47 Which Governor General built the Victoria Memorial in Kolkata in 1905 in the memory of Queen Victoria of Britain?

- Ans
- 1. Lord Canning
 - 2. Lord Ripen
 - 3. Lord Curzon
 - 4. Lord Bentinck

Question ID : 26433074100
Option 1 ID : 264330290521
Option 2 ID : 264330290523
Option 3 ID : 264330290520
Option 4 ID : 264330290522
Status : Answered
Chosen Option : 3

Q.48 What was the approximate overall growth target in India's First Five-Year Plan?

- Ans
- 1. 1.3%
 - 2. 2.1%
 - 3. 4.2%
 - 4. 3.5%

Question ID : 264330131502
Option 1 ID : 264330515111
Option 2 ID : 264330515112
Option 3 ID : 264330515114
Option 4 ID : 264330515113
Status : Answered
Chosen Option : 2

Q.49 Select the correct statement.

- Ans
- 1. In the Southern peninsular region, the temperature difference is quite low between summers and winters.
 - 2. The climate of Gangetic plains is very stable throughout the year.
 - 3. In the Thar desert, the temperature difference is quite low between summers and winters.
 - 4. The climate of the Northern Himalaya region is very hot and humid.

Question ID : 264330131810
Option 1 ID : 264330516341
Option 2 ID : 264330516340
Option 3 ID : 264330516339
Option 4 ID : 264330516342
Status : Answered
Chosen Option : 1

Q.50 _____ originated in Kerala.

- Ans
- 1. Kuchipudi
 - 2. Kathakali
 - 3. Bharatnatyam
 - 4. Sattriya

Question ID : 264330106185
Option 1 ID : 264330417041
Option 2 ID : 264330417044
Option 3 ID : 264330417042
Option 4 ID : 264330417043
Status : Answered
Chosen Option : 2

Q.1 Select the option that is related to the third word in the same way as the second word is related to the first word. (The words must be considered as meaningful English words and must NOT be related to each other based on the number of letters/number of consonants/vowels in the word)
 Notice : Ignore :: Expand:?

- Ans 1. Bulky
 2. Condense
 3. Gentle
 4. Sharp

Question ID : 26433069170
 Option 1 ID : 264330271192
 Option 2 ID : 264330271193
 Option 3 ID : 264330271194
 Option 4 ID : 264330271195
 Status : Answered
 Chosen Option : 2

Q.2 Which figure should replace the question mark (?) in the following series to continue the pattern?

T	U	S	U	T	7	K	7	T	7	K	S	
	K			S			U			T		?
6		7	K		6	6		S	U		6	

Ans

1.

S	7	K
	U	
6		T
2.

K	S	T
	7	
6		U
3.

U	T	7
	K	
6		S
4.

U	S	K
	7	
6		T

Question ID : 264330129614
 Option 1 ID : 264330507823
 Option 2 ID : 264330507822
 Option 3 ID : 264330507824
 Option 4 ID : 264330507825
 Status : Answered
 Chosen Option : 4

Q.3 P, Q, R, S, T, U and V are sitting in a straight row, facing north. V sits at the immediate left of P. U sits at the immediate right of Q. Only R sits between S and T. Only two persons sit to the right of S. P is to the immediate left of T. Who among the following is at the extreme right end of the row?

- Ans
- 1. S
 - 2. T
 - 3. U
 - 4. V

Question ID : 26433087016
Option 1 ID : 264330341708
Option 2 ID : 264330341707
Option 3 ID : 264330341706
Option 4 ID : 264330341705
Status : Answered
Chosen Option : 3

Q.4 Read the given statements and conclusions carefully. Assuming that the information given in the statements is true, even if it appears to be at variance with commonly known facts, decide which of the given conclusions logically follow(s) from the statements.

Statements:

All mangoes are grapes.

All grapes are guavas.

Conclusions:

I. All guavas are grapes.

II. All grapes are mangoes.

- Ans
- 1. Only conclusion II follows
 - 2. Only conclusion I follows
 - 3. Both conclusions I and II follow
 - 4. Neither conclusion I nor II follows

Question ID : 26433069512
Option 1 ID : 264330272561
Option 2 ID : 264330272560
Option 3 ID : 264330272562
Option 4 ID : 264330272563
Status : Answered
Chosen Option : 4

Q.5 Select the number from among the given options that can replace the question mark (?) in the following series.

2, 9, 30, 93, 282, ?

- Ans
- 1. 343
 - 2. 423
 - 3. 849
 - 4. 467

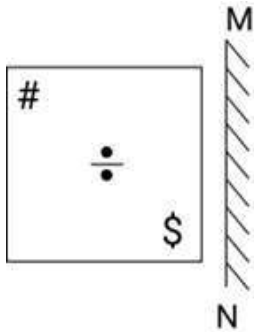
Question ID : 264330109760
Option 1 ID : 264330431319
Option 2 ID : 264330431317
Option 3 ID : 264330431320
Option 4 ID : 264330431318
Status : Answered
Chosen Option : 3

Q.6 Select the option that is related to the fourth term in the same way as the first term is related to the second term and the fifth term is related to the sixth term.
 $11 : 343 :: ? : 125 :: 7 : 27$

- Ans
- 1. 10
 - 2. 11
 - 3. 13
 - 4. 9

Question ID : 26433059937
 Option 1 ID : 264330234580
 Option 2 ID : 264330234582
 Option 3 ID : 264330234583
 Option 4 ID : 264330234581
 Status : Answered
 Chosen Option : 4

Q.7 Select the correct mirror image of the given combination when the mirror is placed at 'MN' as shown below.

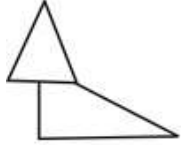


Ans

- 1.
- 2.
- 3.
- 4.

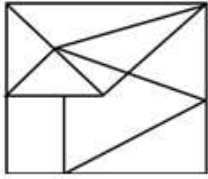
Question ID : 264330130768
 Option 1 ID : 264330512184
 Option 2 ID : 264330512183
 Option 3 ID : 264330512186
 Option 4 ID : 264330512185
 Status : Answered
 Chosen Option : 4

Q.8 Select the option in which the given figure is embedded (rotation is NOT allowed).

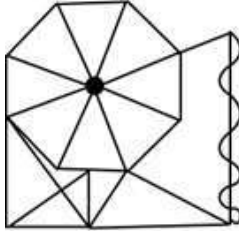


Ans

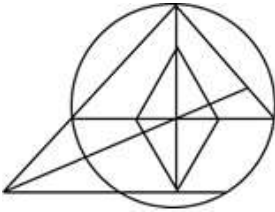
✗ 1.



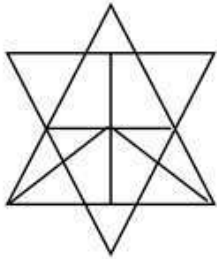
✓ 2.



✗ 3.



✗ 4.



Question ID : 264330114685

Option 1 ID : 264330450825

Option 2 ID : 264330450826

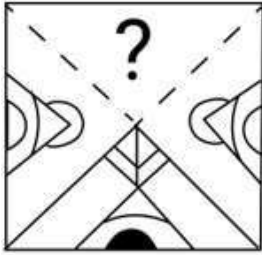
Option 3 ID : 264330450828

Option 4 ID : 264330450827

Status : Answered

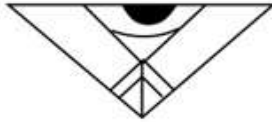
Chosen Option : 2

Q.9 Select the figure from the options that can replace the question mark (?) and complete the given pattern.

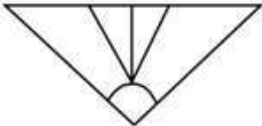


Ans

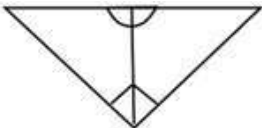
✓ 1.



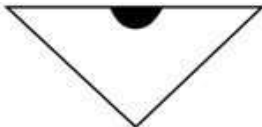
✗ 2.



✗ 3.



✗ 4.



Question ID : 264330106465

Option 1 ID : 264330418162

Option 2 ID : 264330418163

Option 3 ID : 264330418161

Option 4 ID : 264330418164

Status : Answered

Chosen Option : 1

Q.10 Which of the following terms will replace the question mark (?) in the given series?
ZOJ, XMH, VKF, ?, RGB

Ans ✗ 1. TEP

✓ 2. TID

✗ 3. DIT

✗ 4. TED

Question ID : 26433091762

Option 1 ID : 264330360403

Option 2 ID : 264330360401

Option 3 ID : 264330360404

Option 4 ID : 264330360402

Status : Answered

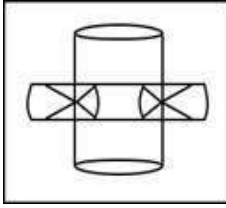
Chosen Option : 2

Q.11 Select the option in which the given figure is embedded (rotation is NOT allowed).

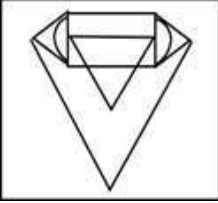


Ans

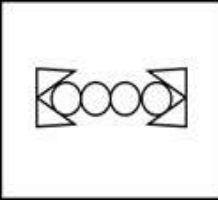
✓ 1.



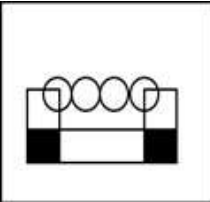
✗ 2.



✗ 3.



✗ 4.



Question ID : 264330116962

Option 1 ID : 264330459930

Option 2 ID : 264330459931

Option 3 ID : 264330459929

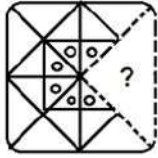
Option 4 ID : 264330459932

Status : Answered

Chosen Option : 2

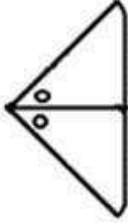
Adda247

Q.12 Select the option figure that will replace the question mark (?) in the figure given below to complete the pattern.

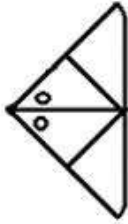


Ans

✗ 1.



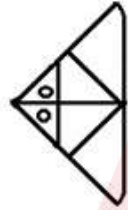
✗ 2.



✗ 3.



✓ 4.



Question ID : 26433089465

Option 1 ID : 264330351364

Option 2 ID : 264330351363

Option 3 ID : 264330351362

Option 4 ID : 264330351361

Status : Answered

Chosen Option : 4

Q.13 Select the correct mirror image of the given combination when the mirror is placed at 'PQ' as shown below.

Z K 5 P V E | P
Q

Ans

- 1. E V P 2 K Z
- 2. E V P 2 K Z
- 3. E V P 2 K Z
- 4. E V P 2 K Z

Question ID : 264330129816

Option 1 ID : 264330508495

Option 2 ID : 264330508497

Option 3 ID : 264330508496

Option 4 ID : 264330508498

Status : Answered

Chosen Option : 4

Q.14 Select the set in which the numbers are related in the same way as are the numbers of the following sets.

(NOTE : Operations should be performed on the whole numbers, without breaking down the numbers into its constituent digits. E.g. 13 – Operations on 13 such as adding /subtracting/multiplying etc. to 13 can be performed. Breaking down 13 into 1 and 3 and then performing mathematical operations on 1 and 3 is not allowed)
(12, 34, 5)
(3, 18, 6)

- Ans
- 1. (2, 36, 4)
 - 2. (2, 10, 3)
 - 3. (4, 5, 1)
 - 4. (4, 30, 2)

Question ID : 26433087044

Option 1 ID : 264330341818

Option 2 ID : 264330341820

Option 3 ID : 264330341819

Option 4 ID : 264330341817

Status : Answered

Chosen Option : 2

Q.15 Select the correct combination of mathematical signs that can sequentially replace the * signs and balance the given equation.
 $25 * 15 * 5 * 4 * 16 * 21$

- Ans
- 1. +, +, x, -, =
 - 2. +, -, x, +, =
 - 3. +, x, -, =, +
 - 4. +, -, x, +, =

Question ID : 26433079092

Option 1 ID : 264330310372

Option 2 ID : 264330310373

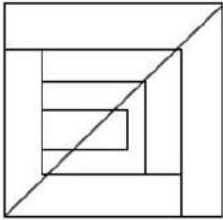
Option 3 ID : 264330310374

Option 4 ID : 264330310375

Status : Answered

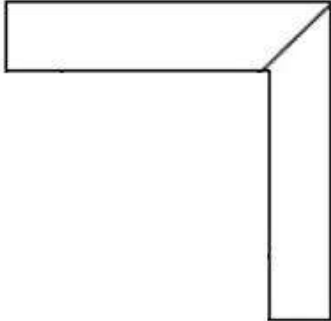
Chosen Option : 1

Q.17 Select the option figure which is embedded in the given figure. (Rotation is NOT allowed).

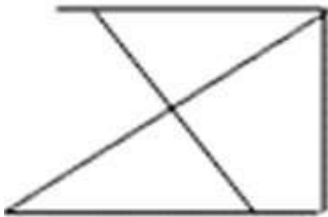


Ans

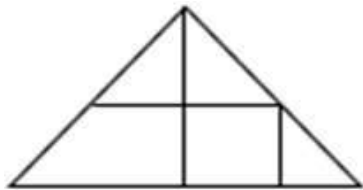
✓ 1.



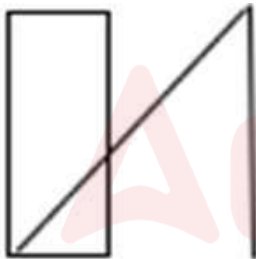
✗ 2.



✗ 3.



✗ 4.



Question ID : 26433085530
Option 1 ID : 264330335822
Option 2 ID : 264330335823
Option 3 ID : 264330335821
Option 4 ID : 264330335824
Status : Answered
Chosen Option : 1

Q.18 Which figure should replace the question mark (?) if the following series were to be continued?

L U X Z Y	U ♡ T ↑ Z	Z U ♡ T ↑	U Y P L T	T U Y P L	?
♡ ↑	L Y Y	L Z	↑ ↑	Z	

Ans

✓ 1.

U ↑ 3 Z P
T L

✗ 2.

L T U Y P
Z ↑

✗ 3.

L P U Y Z
T ↑

✗ 4.

U ↑ Y Z P
T L

Question ID : 264330103912

Option 1 ID : 264330407950

Option 2 ID : 264330407949

Option 3 ID : 264330407951

Option 4 ID : 264330407952

Status : Answered

Chosen Option : 1

Q.19 If 'A' denotes '+', 'B' denotes '×', 'C' denotes '-' and 'D' denotes '÷', then what will come in place of '?' in the following equation?
(21 B 3) C 33 D ? = 60

Ans ✗ 1. 30

✓ 2. 11

✗ 3. 3

✗ 4. 13

Question ID : 26433082476

Option 1 ID : 264330323740

Option 2 ID : 264330323738

Option 3 ID : 264330323737

Option 4 ID : 264330323739

Status : Answered

Chosen Option : 2

Q.20 Which of the following option figures will complete the pattern in the figure given below?



Ans

✗ 1.



✓ 2.



✗ 3.



✗ 4.



Question ID : 26433089623

Option 1 ID : 264330351996

Option 2 ID : 264330351993

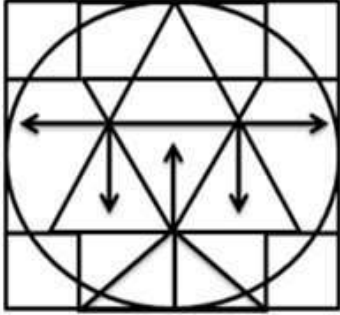
Option 3 ID : 264330351995

Option 4 ID : 264330351994

Status : Answered

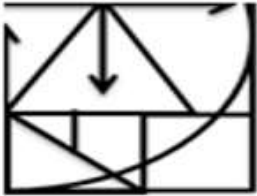
Chosen Option : 2

Q.21 Select the option figure that is embedded in the given figure. (Rotation is not allowed).

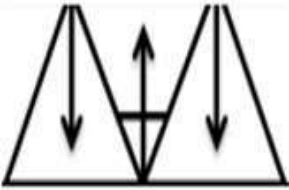


Ans

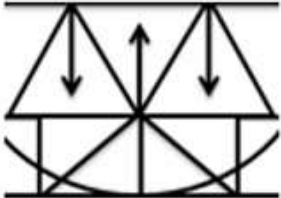
✗ 1.



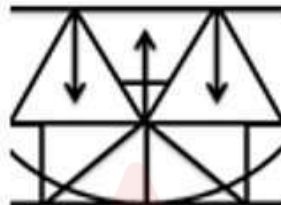
✗ 2.



✓ 3.



✗ 4.



Question ID : 264330114403

Option 1 ID : 264330449697

Option 2 ID : 264330449698

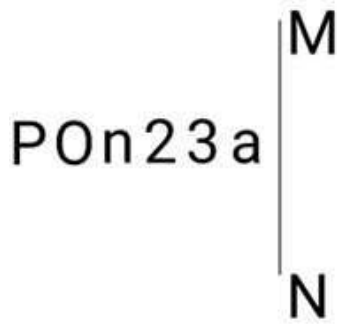
Option 3 ID : 264330449700

Option 4 ID : 264330449699

Status : Answered

Chosen Option : 3

Q.22 Select the correct mirror image of the given figure when the mirror is placed at MN as shown below.



Ans

- ✓ 1. Ɔ Ɔ Ɔ n O Ɔ
- ✗ 2. Ɔ Ɔ 2 n O P
- ✗ 3. Ɔ 3 Ɔ n O Ɔ
- ✗ 4. Ɔ Ɔ Ɔ n O Ɔ

Question ID : 264330126675
Option 1 ID : 264330496373
Option 2 ID : 264330496375
Option 3 ID : 264330496374
Option 4 ID : 264330496372

Status : Answered

Chosen Option : 1

Q.23 In a certain code language, 'CHILD' is written as '278113' and 'DRESS' is written as '31741818'. How will 'FIELD' be written in that language?

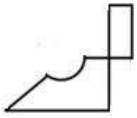
- Ans
- ✗ 1. 686132
 - ✗ 2. 573126
 - ✓ 3. 584113
 - ✗ 4. 695124

Question ID : 26433089411
Option 1 ID : 264330351148
Option 2 ID : 264330351145
Option 3 ID : 264330351146
Option 4 ID : 264330351147

Status : Answered

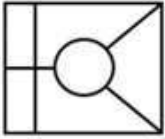
Chosen Option : 3

Q.24 Select the option in which the given figure is embedded (rotation is NOT allowed).

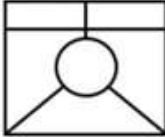


Ans

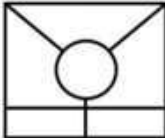
1.



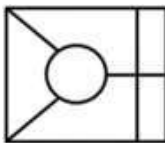
2.



3.



4.



Question ID : 264330101171

Option 1 ID : 264330397229

Option 2 ID : 264330397232

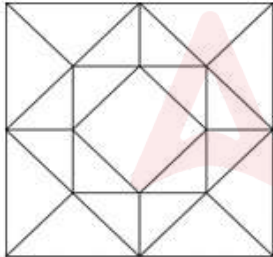
Option 3 ID : 264330397231

Option 4 ID : 264330397230

Status : Answered

Chosen Option : 4

Q.25 How many triangles are there in the given figure?



Ans 1. 30

2. 22

3. 28

4. 20

Question ID : 26433091711

Option 1 ID : 264330360212

Option 2 ID : 264330360210

Option 3 ID : 264330360211

Option 4 ID : 264330360209

Status : Answered

Chosen Option : 3

Q.1 The value of $\frac{0.2 \times 0.2 \times 0.2 + 0.5 \times 0.5 \times 0.5}{0.02 \times 0.02 \times 0.02 + 0.05 \times 0.05 \times 0.05}$ is:

- Ans 1. 1000
 2. 10000
 3. 100
 4. 5000

Question ID : 264330106068
Option 1 ID : 264330416574
Option 2 ID : 264330416575
Option 3 ID : 264330416573
Option 4 ID : 264330416576
Status : Answered
Chosen Option : 1

Q.2 Find the greatest common divisor of 65, 75 and 90.

- Ans 1. 5
 2. 13
 3. 15
 4. 3

Question ID : 264330111426
Option 1 ID : 264330437790
Option 2 ID : 264330437791
Option 3 ID : 264330437789
Option 4 ID : 264330437792
Status : Answered
Chosen Option : 1

Q.3 The marked price of a commodity was ₹3,675. The seller offered a discount of 12% on its sale and incurred a loss of 2% as a consequence. What was the cost price (in ₹) of the commodity?

- Ans 1. 3275
 2. 3300
 3. 3280
 4. 3350

Question ID : 264330131160
Option 1 ID : 264330513752
Option 2 ID : 264330513754
Option 3 ID : 264330513753
Option 4 ID : 264330513751
Status : Answered
Chosen Option : 2

Q.4 A conical tent is required to accommodate 3 persons and each person needs 45 m^2 of space on the ground and 300 m^3 of air to breath. Find the vertical height of the tent (in m).

(Take $\pi = \frac{22}{7}$)

- Ans
- 1. 20
 - 2. 25
 - 3. 18
 - 4. 30

Question ID : 264330112436
Option 1 ID : 264330441831
Option 2 ID : 264330441830
Option 3 ID : 264330441829
Option 4 ID : 264330441832
Status : Answered
Chosen Option : 1

Q.5 If Basket A has 9 apples and 12 bananas, Basket B has 10 apples and 15 bananas, and Basket C has 8 apples and 16 bananas, then the ratios of apples and bananas in _____.

- Ans
- 1. Basket A < Basket C
 - 2. Basket A < Basket B
 - 3. Basket A = Basket C
 - 4. Basket A > Basket B

Question ID : 264330118078
Option 1 ID : 264330464130
Option 2 ID : 264330464128
Option 3 ID : 264330464129
Option 4 ID : 264330464127
Status : Answered
Chosen Option : 4

Q.6 In how much time (in years) will a sum of ₹3,125 become ₹3,515.20 at 8% per annum, compounded half-yearly?

- Ans
- 1. $2\frac{1}{2}$
 - 2. 3
 - 3. $1\frac{1}{2}$
 - 4. 2

Question ID : 264330103985
Option 1 ID : 264330408242
Option 2 ID : 264330408241
Option 3 ID : 264330408243
Option 4 ID : 264330408244
Status : Answered
Chosen Option : 3

Q.7 3 men and 4 women can do a work in 7 days, whereas 2 men and 1 woman can do it in 14 days. 7 women will complete the same work in:

- Ans
- 1. 8 days
 - 2. 10 days
 - 3. 12 days
 - 4. 9 days

Question ID : 264330103679
Option 1 ID : 264330407023
Option 2 ID : 264330407022
Option 3 ID : 264330407021
Option 4 ID : 264330407024
Status : Answered
Chosen Option : 2

Q.8 For reaching at a dance class, Neelam walks at 5 km/h and reaches late by 10 min. If she increases her speed by 1 km/h, then she reaches 15 min early. Find the distance she travelled from her house to her destination.

- Ans
- 1. 10.5 km
 - 2. 12.5 km
 - 3. 10 km
 - 4. 5.5 km

Question ID : 264330183863
Option 1 ID : 264330721128
Option 2 ID : 264330721129
Option 3 ID : 264330721130
Option 4 ID : 264330721131
Status : Answered
Chosen Option : 2

Q.9 If the cost price and selling price of an article are in the ratio of 13 : 17, then the percentage profit is:

- Ans
- 1. $30\frac{7}{13}\%$
 - 2. $30\frac{11}{13}\%$
 - 3. $30\frac{8}{13}\%$
 - 4. $30\frac{10}{13}\%$

Question ID : 264330104498
Option 1 ID : 264330410294
Option 2 ID : 264330410295
Option 3 ID : 264330410293
Option 4 ID : 264330410296
Status : Answered
Chosen Option : 4

Q.10 In an election, there were two candidates Ram and Soham. The total number of voters in this constituency was 85800 and 80% of the total votes were polled. If 65% of the polled votes were cast in favour of Soham, how many votes were received by Ram?

- Ans
- 1. 38038
 - 2. 34034
 - 3. 26026
 - 4. 24024

Question ID : 264330130073
Option 1 ID : 264330509526
Option 2 ID : 264330509524
Option 3 ID : 264330509525
Option 4 ID : 264330509523
Status : Answered
Chosen Option : 4

Q.11 Shashi sold her washing machine for ₹8,000; this was 60% increase in the value. What was the original price?

- Ans
- 1. ₹6,200
 - 2. ₹5,000
 - 3. ₹5,800
 - 4. ₹5,400

Question ID : 264330103608
Option 1 ID : 264330406740
Option 2 ID : 264330406737
Option 3 ID : 264330406739
Option 4 ID : 264330406738
Status : Answered
Chosen Option : 2

Q.12 Find the average of all prime numbers between 15 and 30.

- Ans
- 1. 23
 - 2. 25
 - 3. 24
 - 4. 22

Question ID : 264330130908
Option 1 ID : 264330512744
Option 2 ID : 264330512745
Option 3 ID : 264330512743
Option 4 ID : 264330512746
Status : Answered
Chosen Option : 4

Q.13 Two banks, A and B, offered loans at rates 5.5% and 6.5% per annum, respectively. Ramesh borrowed an amount of ₹3,00,000 from each bank. The positive difference between the amounts of simple interest paid to the two banks by Ramesh after 2 years will be:

- Ans
- 1. ₹2,000
 - 2. ₹4,000
 - 3. ₹8,000
 - 4. ₹6,000

Question ID : 264330182523
Option 1 ID : 264330715885
Option 2 ID : 264330715886
Option 3 ID : 264330715883
Option 4 ID : 264330715884
Status : Answered
Chosen Option : 4

Q.14 Simplify $\left[\left(2\frac{5}{13}\right)\% \text{ of } 9100 + \left(1\frac{1}{17}\right)\% \text{ of } 10200\right] + \frac{3}{5}(17 + 13)^{\frac{1}{3}}$.

- Ans
- 1. 14
 - 2. 9
 - 3. 7
 - 4. 11

Question ID : 264330103687
Option 1 ID : 264330407055
Option 2 ID : 264330407056
Option 3 ID : 264330407054
Option 4 ID : 264330407053
Status : Answered
Chosen Option : 3

Q.15 Find the area (in cm^2) of the triangle whose height is 48 cm and the base is $\frac{1}{6}$ the length of the height?

- Ans
- 1. 190
 - 2. 174
 - 3. 192
 - 4. 188

Question ID : 264330129454
Option 1 ID : 264330507185
Option 2 ID : 264330507184
Option 3 ID : 264330507182
Option 4 ID : 264330507183
Status : Answered
Chosen Option : 3

Q.1 In Microsoft Excel 365, which of the following is NOT done by Conditional Formatting?

- Ans 1. We can set condition to look for bold and apply italics on them.
2. We can delete condition if it is not required.
3. We can apply font border and pattern formats that meet the specified conditions.
4. We can add more than one condition to format.

Question ID : 264330182059
Option 1 ID : 264330714076
Option 2 ID : 264330714077
Option 3 ID : 264330714078
Option 4 ID : 264330714075
Status : Answered
Chosen Option : 1

Q.2 Which of the following folders has an unsolicited and unwanted junk email sent out in bulk to an indiscriminate recipient list?

- Ans 1. Spam folder
2. Outbox
3. Inbox
4. Draft

Question ID : 264330178587
Option 1 ID : 264330700377
Option 2 ID : 264330700378
Option 3 ID : 264330700375
Option 4 ID : 264330700376
Status : Answered
Chosen Option : 1

Q.3 Which of the following keyboard shortcuts is used to apply bullets in MS Word 365?

- Ans 1. Ctrl + Shift + I
2. Ctrl + Shift + B
3. Ctrl + Shift + L
4. Ctrl + Shift + C

Question ID : 264330180831
Option 1 ID : 264330709288
Option 2 ID : 264330709289
Option 3 ID : 264330709287
Option 4 ID : 264330709290
Status : Answered
Chosen Option : 3

Q.4 In MS word 365 What does the 'Header' section in the 'Page Setup' dialog box allow you to do?

- Ans 1. Change the page orientation
2. Adjust the page margins
3. Add a header with text or page numbers to the top of each page
4. Change the line spacing of the document

Question ID : 264330180846
Option 1 ID : 264330709349
Option 2 ID : 264330709347
Option 3 ID : 264330709348
Option 4 ID : 264330709350
Status : Answered
Chosen Option : 3

Q.5 Which function is used to display the current date in MS-excel 365?

- Ans
- 1. DATE()
 - 2. TODAY()
 - 3. MONTH()
 - 4. DAY()

Question ID : 264330176689
Option 1 ID : 264330692972
Option 2 ID : 264330692971
Option 3 ID : 264330692974
Option 4 ID : 264330692973
Status : Answered
Chosen Option : 1

Q.6 What does the 'Grammar' check in Microsoft Word 365 primarily focus on?

- I. Spelling errors
- II. Sentence structure and syntax

- Ans
- 1. Neither I nor II
 - 2. Only II
 - 3. Both I and II
 - 4. Only I

Question ID : 264330180715
Option 1 ID : 264330708830
Option 2 ID : 264330708828
Option 3 ID : 264330708829
Option 4 ID : 264330708827
Status : Answered
Chosen Option : 4

Q.7 In MS Excel 365, The basic syntax or symbol required to execute a function in MS-Excel is:

- Ans
- 1. \$
 - 2. =
 - 3. :
 - 4. +

Question ID : 264330175955
Option 1 ID : 264330690118
Option 2 ID : 264330690116
Option 3 ID : 264330690117
Option 4 ID : 264330690115
Status : Answered
Chosen Option : 2

Q.8 The shortcut key used to save the document in MS-Word 365 is:

- Ans
- 1. Ctrl + S
 - 2. Ctrl + A
 - 3. Ctrl + X
 - 4. Ctrl + V

Question ID : 264330175980
Option 1 ID : 264330690216
Option 2 ID : 264330690217
Option 3 ID : 264330690218
Option 4 ID : 264330690215
Status : Answered
Chosen Option : 1

Q.9 Which of the following protocols is commonly used for sending and receiving emails between servers?

- Ans**
- 1. Hyper Text Transfer Protocol (HTTP)
 - 2. Transmission Control Protocol (TCP)
 - 3. Simple Mail Transfer Protocol (SMTP)
 - 4. File Transfer Protocol (FTP)

Question ID : 264330180806

Option 1 ID : 264330709189

Option 2 ID : 264330709190

Option 3 ID : 264330709188

Option 4 ID : 264330709187

Status : Answered

Chosen Option : 4

Q.10 Which of the following shortcut keys can be used to 'align right' the selected text in MS-Word 365?

- Ans**
- 1. Ctrl + U
 - 2. Ctrl + R
 - 3. Ctrl + E
 - 4. Ctrl + J

Question ID : 264330175981

Option 1 ID : 264330690221

Option 2 ID : 264330690222

Option 3 ID : 264330690219

Option 4 ID : 264330690220

Status : Answered

Chosen Option : 2

Adda247