

RPF Constable

**Previous Year Paper 17
Jan 2019 Shift 1**

Adda247

Test Prime

ALL EXAMS,
ONE SUBSCRIPTION



70,000+
Mock Tests



Personalised
Report Card



Unlimited
Re-Attempt



600+
Exam Covered



Previous Year
Papers



500%
Refund



ATTEMPT FREE MOCK NOW

Roll No:

Registration No:

Name: DA

Date: 17-Jan-2019 -S1

Examination: Online Examination - Constable

Section 1 - Online Examination

Question No.1

1.00

Bookmark

Which one of the following is the lowest land area?

- (A) Africa - (Alternative 2)
(B) Australia - (Alternative 4)
(C) Asia - (Alternative 1)
(D) Europe - (Alternative 3)

Question No.2

1.00

Bookmark

Under which fundamental right are the freedom of speech and expression?

- (A) Right to Constitutional Measures - (Optional 3)
(B) Right to Religious Freedom - (Alternative 2)
(C) Right to freedom - (Alternative 1)
(D) Right to Equality - (Alternative 4)

Question No.3

1.00

Bookmark

Which of the following temples is famous for the erotic composition?

- (A) Khajuraho Temple - (Alternative 1)
(B) Martand Sun Temple - (Alternative 3)
(C) Kamakhya Temple - (Alternative 4)
(D) Dilwara Temple - (Alternative 2)

Question No.4

1.00

Bookmark

If there is only water in the liquid media, then the mixture is called _____.

- (A) Parasitic Mixture - (Alternative 2)
(B) Contraceptive Blend - (Alternative 1)
(C) Highly Compound - (Optional 3)
(D) Collateral mixing - (Alternative 4)

Question No.5

1.00

Bookmark

Which soil has covered most of India?

- (A) Alluvial Soil - (Alternative 4)
(B) Junky Rocky Soil - (Alternative 3)
(C) Red Soil - (Alternative 2)
(D) Black Soil - (Alternative 1)

Question No.6

1.00

Bookmark

Which of the following options is related to the Kabaddi game?

- (A) **AKFI - (Alternative 4)**
(B) AIKF - (Alternative 1)
(C) FIFA - (Alternative 2)
(D) BCCI - (Alternative 3)

Question No.7

1.00

Bookmark

Indian National Congress was established in _____.

- (A) **1885 - (Alternative 3)**
(B) 1950 - (Alternative 2)
(C) 1889 - (Optional 1)
(D) 1947 - (Alternative 4)

Question No.8

1.00

Bookmark

Which of the following is a molecular monolithic?

- (A) Chlorine - (Alternative 3)
(B) Oxygen - (Alternative 4)
(C) Sulfur - (Alternative 1)
(D) **Argon - (Alternative 2)**

Question No.9

1.00

Bookmark

Which of these separates Andaman and Nicobar Islands?

- (A) Eight Point Bays - (Alternative 4)
(B) The narrow path of Duncan - (Alternative 3)
(C) **Ten degree creek - (Alternative 1)**
(D) Coco Bay - (Alternative 2)

Question No.10

1.00

Bookmark

Tuberculosis and TB disease are caused by _____.

- (A) ProtoZoa - (Alternative 2)
(B) Fungus - (Alternative 4)
(C) Virus - (Alternative 3)
(D) **Bacterial - (Alternative 1)**

Question No.11

1.00

Bookmark

The relative speed of the two surfaces in contact with each other due to friction is _____.

- (A) Getting Involved - (Alternative 1)
(B) Increases - (Optional 4)
(C) No results - (Optional 3)
(D) **Conflicts - (Alternative 2)**

Question No.12

1.00

Bookmark

The Koleru lake is found in the triangle of _____.

- (A) Ganges and Mahanadi - (Alternative 1)
(B) Godavari and Krishna - (Alternative 3)
(C) Mahanadi and Godavari - (Alternative 2)
(D) Krishna and Kaveri - (Alternative 4)

Question no.13

1.00

Bookmark

How many Anglo-Indian members can be nominated in the Lok Sabha?

- (A) 2 - (Optional 3)
(B) 5 - (Optional 4)
(C) 4 - (Optional 2)
(D) 3 - (Optional 1)

Question No.14

1.00

Bookmark

If a person is elected to both the Parliament House, then the person should be informed about working within the _____, the desired hall of the house.

- (A) 30 Days - (Optional 3)
(B) 10 Days - (Optional 1)
(C) 14 Days - (Optional 2)
(D) 7 Day - (Optional 4)

Question No.15

1.00

Bookmark

Who invented the nucleus of the cell?

- (A) Robert Hook - (Optional 1)
(B) Alexander Fleming - (Alternative 4)
(C) Anthony Van Leighenhoke - (Alternative 3)
(D) Robert Brown - (Alternative 2)

Question No.16

1.00

Bookmark

Where is the Ashoka Pillar Lion?

- (A) Sanchi - (Alternative 1)
(B) Sarnath - (Alternative 3)
(C) Pataliputra - (Alternative 2)
(D) Mehrauli - (Alternative 4)

Question no.17

1.00

Bookmark

Which of the following is a fiber made by chemical reactions on a wooden pulp?

- (A) Polyester - (Alternative 4)
(B) Nylon - (Alternative 3)
(C) Bag - (Alternative 1)
(D) Rayon - (Alternative 2)

Question No.18

1.00

Bookmark

In the Rio Paralympic 2016, which medal winner of the first Indian woman Paralympic medal, Deepa Malik won?

- (A) Copper - (Alternative 1)
(B) Silver - (Optional 3)
(C) Gold - (Alternative 2)
(D) Bronze - (Alternative 4)

Question No.19

1.00

Bookmark

The entrances to the South Indian temples are called _____.

- (A) Gopure - (Alternative 4)
(B) House - (Alternative 2)
(C) Aircraft - (Alternative 1)
(D) Space - (Alternative 3)

Question no.20

1.00

Bookmark

"Developing the ability to meet the needs of the current generation, without pushing the ability to meet the needs of future generations" - What explains this sentence?

- (A) Low Development - (Alternative 4)
(B) Sustainable Development - (Alternative 2)
(C) Economic Development - (Alternative 3)
(D) Economic Growth - (Alternative 1)

Question no.21

1.00

Bookmark

What is the relative density unit?

- (A) No Unit - (Optional 4)
(B) kg m^{-1} - (Alternative 3)
(C) kg m^{-2} - (Alternative 2)
(D) kg m^{-3} - (Alternative 1)

Question no.22

1.00

Bookmark

Which of the following popular Sultan of Delhi built the Alai Darwaza?

- (A) Firozshah Tughlaq - (Alternative 2)
(B) Allauddin Khilji - (Alternative 1)
(C) Muhammad bin Tughluq - (Alternative 3)
(D) Balban - (Alternative 4)

Question no.23

1.00

Bookmark

The snow salt is _____.

- (A) 273.15 K - (Optional 3)
(B)

- 273.15 ° F - (Alternative 2)
- (C) 273.15 ° C - (Alternative 1)
- (D) 273.15 ° R - (Alternative 4)

Question No.24

1.00

Bookmark

Which of the following is the largest waterfall in the world?

- (A) Yosemite Falls - (Alternative 1)
- (B) Noah's waterfall - (Alternative 2)
- (C) Brown Waterfall - (Alternative 3)
- (D) **Angel Falls - (Alternative 4)**

Question no.25

1.00

Bookmark

In which Upanishad does the word Satyameva Jayate pass?

- (A) **Mundakopanishad - (Alternative 3)**
- (B) Chhandogyopanishad - (Alternative 1)
- (C) Kathopanishad - (Alternative 4)
- (D) Colonization - (Alternative 2)

Question No.26

1.00

Bookmark

Olympic medal winner Sushil Kumar is associated with which sport?

- (A) Shooting - (Alternative 3)
- (B) Weight Lifting - (Alternative 1)
- (C) Boxing - (Alternative 4)
- (D) **Wrestling - (Optional 2)**

Question no.27

1.00

Bookmark

From which of these places does the river Narmada originate?

- (A) **Amarkantak - (Alternative 4)**
- (B) Malwa Plateau - (Alternative 3)
- (C) Baghelkhand - (Alternative 2)
- (D) Bundelkhand - (Alternative 1)

Question no.28

1.00

Bookmark

Which of the following cities is known as the world's capital of iron and steel?

- (A) **Pittsburgh - (Alternative 1)**
- (B) Moscow - (Alternative 2)
- (C) Ontario - (Alternative 4)
- (D) London - (Alternative 3)

Question no.29

1.00

Bookmark

On which river are the tallest waterfalls found in India?

- (A) Kaveri - (Alternative 3)
(B) Periyar - (Alternative 1)
(C) Damodar - (Alternative 4)
(D) **Sharawati - (Alternative 2)**

Question no.30

1.00

Bookmark

What is the right to equality in the fundamental rights?

- (A) Gender Equality - (Alternative 4)
(B) **All people are equal before the law - (Alternative 1)**
(C) People in the same community are the same - (Alternative 2)
(D) Similarity Depending on Social Quality - (Optional 3)

Question no.31

1.00

Bookmark

Who built the famous beach at Mahabalipuram?

- (A) Narasimhavarman I - (Alternative 1)
(B) Rajendra Chol - (Alternative 2)
(C) Aditya Karikalan - (Alternative 4)
(D) **Narasimhavarman II - (Alternative 3)**

Question no.32

1.00

Bookmark

_____ is given religious independence.

- (A) Minorities only - (Optional 3)
(B) Only the majority - (Optional 2)
(C) **All Indian Citizens - (Alternative 4)**
(D) Only specific community - (Optional 1)

Question no.33

1.00

Bookmark

The red color of red soil is due to _____.

- (A) **Ferric Oxide - (Alternative 1)**
(B) Phosphor Oxide - (Alternative 3)
(C) Silicon Oxide - (Alternative 4)
(D) Potassium Oxide - (Alternative 2)

Question no.34

1.00

Bookmark

When was the first universal council full?

- (A) 1873 - (Alternative 3)
(B) 1839 - (Alternative 2)
(C) 1883 - (Alternative 4)
(D) **1893 - (Optional 1)**

Question no.35

1.00

Bookmark

What is the meaning of an alternate program in economics?

- (A) Long Term Plan - (Optional 4)
(B) Short Term Plan - (Optional 1)
(C) Annual Plan - (Optional 3)
(D) Sliding Scheme - (Alternative 2)

Question No.36

1.00

Bookmark

The bronze statue of a dancer is found in which tower?

- (A) Kalibanga - (Alternative 4)
(B) Lothal - (Alternative 3)
(C) Made-up - (Optional 1)
(D) Mohenjodaro - (Alternative 2)

Question no.37

1.00

Bookmark

Venus revolves around its _____ to _____ of the axis.

- (A) North, Southwest - (Alternative 3)
(B) North, South - (Alternative 2)
(C) East, West - (Alternative 4)
(D) West, East - (Alternative 1)

Question No.38

1.00

Bookmark

What does the secular state mean?

- (A) Multilingual - (Optional 4)
(B) Just following one religion - (Alternative 1)
(C) Beautification - (Alternative 2)
(D) Secure - (Optional 3)

Question No.39

1.00

Bookmark

Which of these is a system used in Indian economy?

- (A) Public Areas - (Alternative 2)
(B) Capital Economy - (Optional 3)
(C) Private Sector - (Alternative 1)
(D) Mixed Economy - (Alternative 4)

Question No.40

1.00

Bookmark

Who is the governor of the state?

- (A) Council of Ministers - (Alternative 1)
(B) Parliament - (Alternative 2)
(C) Cabinet - (Alternative 3)
(D) Parliamentary Committees - (Alternative 4)

Question No.41

1.00

Bookmark

The world's _____ is the highest peak.

- (A) Kanchanganga Mountains - (Alternative 1)
(B) Kilimanjaro Mountains - (Alternative 2)
(C) Salad Mountain - (Alternative 4)
(D) **Mount Everest - (Alternative 3)**

Question No.42

1.00

Bookmark

In Yoga types, what is the state of the semi-Padmasan?

- (A) Pigeons - (Alternative 1)
(B) Locust - (Alternative 2)
(C) **Half Lily - (Alternative 3)**
(D) Frog - (Alternative 4)

Question No.43

1.00

Bookmark

If the parliament does not approve, the maximum period of ordinance is _____.

- (A) 6 months - (Optional 1)
(B) Limitless - (Optional 4)
(C) **6 months and 6 weeks - (Optional 2)**
(D) 1 year - (Optional 3)

Question No.44

1.00

Bookmark

In the architecture, the Panchayat style is related to the term _____.

- (A) City - (Alternative 3)
(B) Dam - (Alternative 4)
(C) Castle - (Alternative 1)
(D) **Temple - (Alternative 2)**

Question No.45

1.00

Bookmark

Which of these firms is associated with the Art Fist Artistic Gymnastics?

- (A) Davis Cup - (Optional 1)
(B) **World Challenge Cup - (Alternative 3)**
(C) Dodging Cup - (Alternative 4)
(D) Azlan Shah Cup - (Alternative 2)

Question no.46

1.00

Bookmark

The Council of State is also called _____.

- (A) House of the People - (Alternative 1)
(B) Alternate - 4
(C) **Council of the States - (Alternative 2)**
(D) Parliament - (Alternative 3)

Question no.47

1.00

Bookmark

The value that is compared to the currency of one currency is called _____.

- (A) Tariff - (Optional 3)
(B) Customs - (Optional 4)
(C) International Balance Sheet - (Alternative 2)
(D) **Forex Currency Exchange Rate - (Optional 1)**

Question No.48

1.00

Bookmark

What is the term "rider" associated with which sport / sport?

- (A) Cricket - (Alternative 3)
(B) **Kabaddi - (Alternative 4)**
(C) Gymnastics - (Alternative 2)
(D) Tennis - (Alternative 1)

Question No.49

1.00

Bookmark

The Kendaria Mahadev Temple in Khajuraho is dedicated to Lord _____.

- (A) Brahma - (Alternative 3)
(B) Vishnu - (Alternative 2)
(C) **Shankar - (Alternative 1)**
(D) Krishna - (Alternative 4)

Question No.50

1.00

Bookmark

Financial support is controlled by _____.

- (A) State Bank of India - (Alternative 3)
(B) **Reserve Bank - (Alternative 4)**
(C) Industrial Bank - (Alternative 1)
(D) Union Bank of India - (Alternative 2)

Question no.51

1.00

Bookmark

Read the following sentences and answer the question below.

A @ B is A is the husband of B
A # B is A's wife.
A \$ B is A's brother.
A% B is the sister of A and B.

M \$ N% O @ P What is the relationship between M's P in this equation?

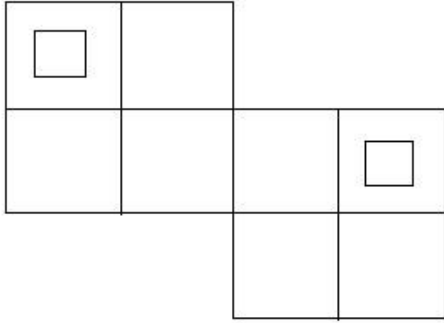
- (A) Brother - (Alternative 3)
(B) **Mehuna / Dir - (Alternative 4)**
(C) Lahini / Nandan - (Alternative 1)
(D) Cousin - (Alternative 2)

Question no.52

1.00

Bookmark

How many squares are there in given figure?



- (A) 8 - (Optional 3)
- (B) 10 - (Optional 4)
- (C) 14 - (Optional 1)
- (D) 12 - (Optional 2)

Question no.53

1.00

Bookmark

Identify the following numbers in the chain.
3, 7, 19, 55, 163, ?

- (A) 379 - (Optional 4)
- (B) 487 - (Alternative 2)
- (C) 478 - (Optional 3)
- (D) 326 - (Optional 1)

Question No.54

1.00

Bookmark

Identify the appropriate reflection of the question-image given in the following options.

MODEL

- (A) **MODEL** - (Optional 3)
- (B) **MODEL** - (Optional 2)
- (C) **WODEF** - (Optional 4)
- (D) **MODEF** - (Optional 1)

Question no.55

1.00

Bookmark

Four out of the following five have a certain resemblance, so a group is formed. So do not know if you are not in the group.

NP, MJ, CE, QS, XZ

- (A) QS - (Optional 3)
 (B) NP - (Alternative 1)
 (C) XZ - (Alternative 4)
 (D) **MJ - (Alternative 2)**

Question no.56

1.00

Bookmark

Carefully read the information given and answer the question below.

In each of the two parallel quadrilateral, four persons of eight are sitting in such a way that neighbors have the same distinction.

In the queue - 1, M, N, O and P are sitting, and the faces are all south.

In the queue - 2, E, F, G and H are sitting and they all face the north.

Therefore, in the given meeting arrangement, the face of each queue comes first to the other line.

- i) E is sitting at the third position on the right side of G, and its face comes in front of M
 ii) P and N are neighboring neighbors.
 iii) O does not face G's face.
 iv) F is sitting on the right side of G's and its face comes in front of P.

If N has exchanged the space with O and P has exchanged the space with M, who is sitting next to H?

- (A) **N - (Alternative 3)**
 (B) M - (Alternative 4)
 (C) P - (Alternative 2)
 (D) O - (Alternative 1)

Question no.57

1.00

Bookmark

Considering the logic of the first couple, choose an option that has the same logic in place of the question mark.

Lion: Den :: Bee ??

- (A) Stable - (Optional 1)
 (B) **Hive - (Alternative 4)**
 (C) Cub - (Alternative 3)
 (D) Burrow - (Alternative 2)

Question no.58

1.00

Bookmark

In this question, there are two statements giving a relation with each other, and the results are given i, ii, iii. Assuming all the statements are true, find out which conclusions are definitely true.

Statement: $P < Q \leq R > O$; $T < M > U < P$

Conclusion:

i) $M > R$

ii) $Q \leq O$

iii) $U < R$

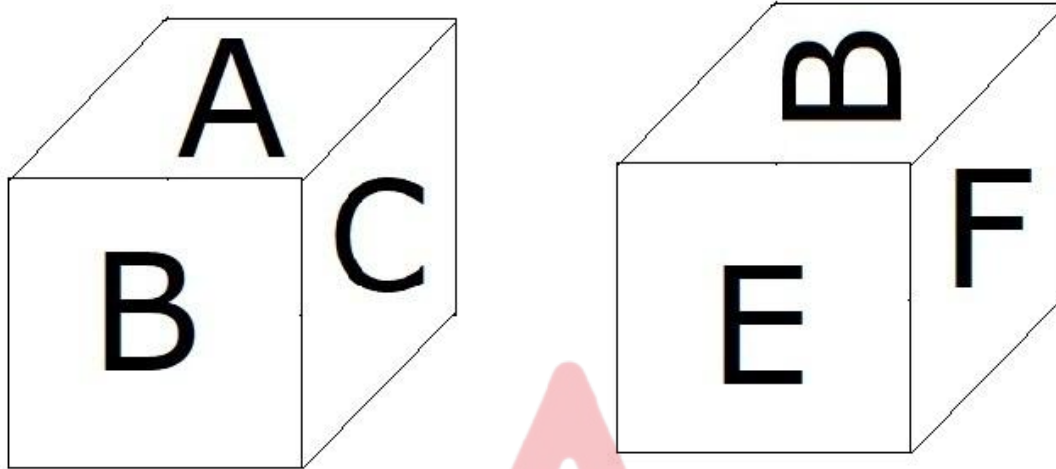
- (A) **Only iii) - (Optional 3)**
 (B) Only i) and iii) - (Optional 2)
 (C) Only i) and ii) - (Optional 1)
 (D) All are rational. - (Optional 4)

Question no.59

1.00

Bookmark

As shown in the figure, each page of the fash is printed with letters A, B, C, D, E and F. What is printed on the side page against A character?



- (A) F - (Optional 1)
- (B) C - (Alternative 3)
- (C) D - (Alternative 4)
- (D) B - (Alternative 2)

Question No.60

1.00

Bookmark

In this question, three conclusions are given after three conclusions. You have to assume that everything in the statement is true, and then there are two conclusions to be taken concurrently and after a reasonable doubt of the information given in the statement, decide which conclusions are relevant to the statement.

Statement: Some jets are troughs. There is no traction rack. There are some cabs jets.

Conclusion:

- i) There are some cabs trumps.
- ii) Some teats are jets.
- iii) All jets are cabs.

- (A) All are rational. - (Optional 3)
- (B) Only i) and iii) - (Optional 2)
- (C) Only i) and ii) - (Optional 1)
- (D) There are no logical ones. - (Optional 4)

Question No.61

1.00

Bookmark

Carefully read the information given and answer the question below.

In each of the two parallel quadrilateral, four persons of eight are sitting in such a way that neighbors have the same distinction.

In the queue - 1, M, N, O and P are sitting, and the faces are all south.

In the queue - 2, E, F, G and H are sitting and they all face the north.

Therefore, in the given meeting arrangement, the face of each queue comes first to the other line.

- i) E is sitting at the third position on the right side of G, and its face comes in front of M
- ii) P and N are neighboring neighbors.

- iii) O does not face G's face.
- iv) F is sitting on the right side of G's and its face comes in front of P.

Who is sitting next to the left side of P?

- (A) O - (Optional 3)
- (B) Opposite G - (Optional 2)
- (C) M - (Alternative 1)
- (D) Facing front of F - (Alternative 4)

Question No.62

1.00

Bookmark

Considering the logic of the first couple, choose an option that has the same logic in place of the question mark.

Embryos: Embryology :: Weather: ??

- (A) Oology - (Alternative 2)
- (B) Metrology - (Alternative 3)
- (C) Cytology - (Alternative 4)
- (D) Meteorology - (Alternative 1)

Question No.63

1.00

Bookmark

Identify the following numbers in the chain.

15, 26, 56, 108, 220, ?

- (A) 546 - (Optional 3)
- (B) 444 - (Optional 4)
- (C) 660 - (Alternative 2)
- (D) 436 - (Optional 1)

Question No.64

1.00

Bookmark

In this question, a transcript is given and a statement is given below. Read the excerpts given carefully and select the statement based on the given excerpt.

The loss of livelihoods and loss of milk production in Kerala is causing huge financial losses, loss of life and loss of milk every year and loss of milk production. Apart from this, the state government is unable to carry out processing and procurement of animal products and the state has suffered huge financial loss. It was foretold that due to FMD, the country is losing more than 4000 crores annually. In this situation, the Kerala government had made strong decisions to control this terrible disease in its state. Due to lack of financial support to the State to implement such a big project, it was decided that the NDDB should be asked to provide infrastructure and financial assistance from outside organizations such as National Dairy Development Board (NDDB). After a continuous discussion at the government level,

Statement: The National Dairy Development Board (NDDB) has refused to provide infrastructure and financial assistance.

Select the correct option from the following options.

- A - The statement is definitely true.
- B - The statement is probably true.
- C - Can not determine the correct option from the given statement.
- D - The legislation is definitely false.

- (A) A - (Alternative 1)
- (B) D - (Alternative 4)
-

- (C) B - (Alternative 2)
(D) C - (Alternative 3)

Question No.65

1.00

Bookmark

Identify the following numbers in the chain.

109, 133, 181, 253, 349,?

- (A) 445 - (Alternative 4)
(B) 458 - (Optional 1)
(C) 474 - (Alternative 2)
(D) **469 - (Optional 3)**

Question no.66

1.00

Bookmark

Four out of the following five have a certain resemblance, so a group is formed. So do not know if you are not in the group.

Table, chair, desk, car, cot

- (A) Desk - (Optional 4)
(B) Cottage - (Alternative 1)
(C) Chair - (Alternative 2)
(D) **Car - (Alternative 3)**

Question No.67

1.00

Bookmark

Four out of the following five have a certain resemblance, so a group is formed. So do not know if you are not in the group.

T, E, A, U, O

- (A) A - (Alternative 3)
(B) E - (Alternative 2)
(C) **T - (Alternative 4)**
(D) O - (Alternative 1)

Question No.68

1.00

Bookmark

In a particular code language, the term 'TOMATO' is written as 'ZUSGZU'; how will the word 'CITRIC' be written in that language?

- (A) **IOZXOI - (Optional 3)**
(B) OIZXIO - (Alternative 4)
(C) JOZXOJ - (Alternative 2)
(D) IOZXIO - (Optional 1)

Question No.69

1.00

Bookmark

In this question, after two statements two conclusions i and ii are given. You have to assume that everything in the statement is true, and then there are two conclusions to be taken concurrently and after a reasonable doubt of the information given in the statement, decide which conclusions are relevant to the statement.

Statement: All the gems are bitter. There are some pimps.

Conclusion:

- i) Some gems are on edge.

ii) There are some white gems.

Choose the correct option in the following options:

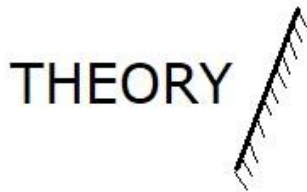
- (A) The only conclusion i have is logical.
- (B) The only conclusion ii is logical.
- (C) i or ii is logical.
- (D) i and ii are not logical.
- (E) i and ii are both rational.
- (A) E - (Alternative 4)
- (B) A - (Alternative 1)
- (C) B - (Alternative 2)
- (D) D - (Alternative 3)

Question No.70

1.00

Bookmark

If the mirror is placed on the shaded line, what would be the correct image of the given figure from the following options?



- (A) - (Optional 3)
- (B) - (Optional 2)
- (C) - (Optional 4)
- (D) - (Optional 1)

Question No.71

1.00

Bookmark

In this question, a transcript is given and a statement is given below. Read the excerpts given carefully and select the statement based on the given excerpt.

The loss of livelihoods and loss of milk production in Kerala is causing huge financial losses, loss of life and loss of milk every year and loss of milk production. Apart from this, the state government is unable to carry out processing and procurement of animal products and the state has suffered huge financial loss. It was foretold that due to FMD, the country is losing more than 4000 crores annually. In this situation, the Kerala government had made strong decisions to control this terrible disease in its state.

Due to lack of financial support to the State to implement such a big project, it was decided that the NDDB should be asked to provide infrastructure and financial assistance from outside organizations such as National Dairy Development Board (NDDB). After a continuous discussion at the government level,

Statement: The inability to produce and export animal products is also one of the major reasons for the big financial losses to the state.

Select the correct option from the following options.

- A - The statement is definitely true.
- B - The statement is probably true.
- C - Can not determine the correct option from the given statement.
- D - The legislation is definitely false.

- (A) D - (Alternative 4)
- (B) C - (Alternative 3)
- (C) B - (Alternative 2)
- (D) A - (Alternative 1)

Question No.72

1.00

Bookmark

In this question, relationships are shown in different elements of the statement. After this statement two conclusions have been given.

Statement: $M = N \leq O < P > Q \geq R$

Conclusion:

- i) $M = O$
- ii)

Choose the correct option in the following options.

- (A) The only conclusion i have is logical.
- (B) The only conclusion ii is logical.
- (C) i or ii is logical.
- (D) i and ii are not logical,
- (i) both i and ii are logical.

- (A) B - (Alternative 2)
- (B) D - (Alternative 4)
- (C) C - (Alternative 3)
- (D) A - (Alternative 1)

Question no.73

1.00

Bookmark

A is the only daughter of B and his wife is C. D is the son of C. What is the relationship between children of C's A?

- (A) Grandmother - (alternative 3)
- (B) I - (Alternative 2)
- (C) Unmarried - (Alternative 1)
- (D) Kaku / Aata - (Alternative 4)

Question No.74

1.00

Bookmark

In this question, after one statement, two conclusion numbers i and ii are given. You have to assume that everything in the statement is true, and then there are two conclusions to be taken together and after determining the information given in the statement, decide which conclusions are relevant to the

statement.

Statement: Only rich people live in Seoul. Kim lives in Seoul.

- i) Kim needs to be rich.
- ii) Kim lives a happy life.

Choose the correct option in the following options:

- (A) The only conclusion i have is logical.
- (B) The only conclusion ii is logical.
- (C) i or ii is logical.
- (D) i and ii are not logical,
- (i) both i and ii are logical.
- (A) E - (Alternative 4)
- (B) D - (Alternative 3)
- (C) B - (Alternative 2)
- (D) A - (Alternative 1)

Question No.75

1.00

Bookmark

Which of the following options is given for a given series?

Z	Z	@	Z	@	@
@		@		Z	Z

(A)

Z	@

- (Optional 4)

(B)

	Z
@	


- (Optional 1)

(C)

@	
	Z

- (Optional 2)

(D)



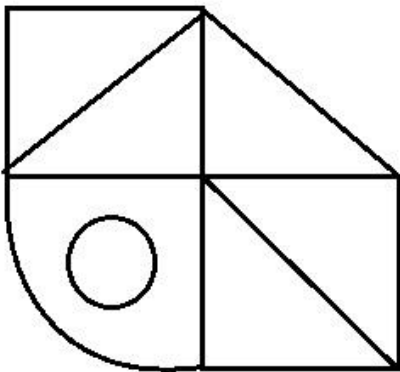
- (Optional 3)

Question No.76

1.00

Bookmark

How many arcane triangles can be formed from the given figure?



- (A) 6 - (Optional 4)
- (B) 3 - (Optional 2)
- (C) 4 - (Optional 3)
- (D) **5 - (Optional 1)**

Question No.77

1.00

Bookmark

Considering the logic of the first couple, choose an option that has the same logic in place of the question mark.

P: M :: E: ??

- (A) H - (Alternative 3)
- (B) G - (Alternative 4)
- (C) C - (Alternative 2)
- (D) **B - (Alternative 1)**

Question No.78

1.00

Bookmark

"I am the father of my wife's sister." So what is the relationship with that man's unfreexing wife?

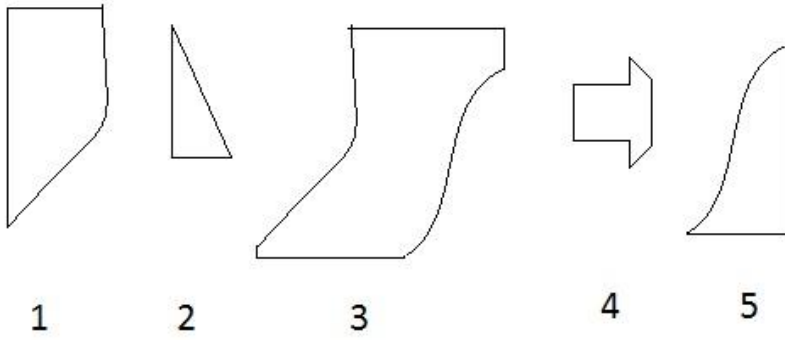
- (A) Kaka / Mama - (Alternative 3)
- (B) Father - (Alternative 2)
- (C) **Grandfather - (alternative 1)**
- (D) Zaboba - (Alternative 4)

Question No.79

1.00

Bookmark

Choosing the right option from the following options creates a full square. (If you select 3 of 5 images)



- (A) 1,3,4 - (Optional 3)
- (B) 1,4,5 - (Alternative 2)
- (C) 1,3,5 - (Optional 4)
- (D) 2,3,4 - (Optional 1)

Question No. 80

1.00

Bookmark

Carefully read the information given and answer the question below.
In each of the two parallel quadrilateral, four persons of eight are sitting in such a way that neighbors have the same distinction.

In the queue - 1, M, N, O and P are sitting, and the faces are all south.

In the queue - 2, E, F, G and H are sitting and they all face the north.

Therefore, in the given meeting arrangement, the face of each queue comes first to the other line.

- i) E is sitting at the third position on the right side of G, and its face comes in front of M
- ii) P and N are neighboring neighbors.
- iii) O does not face G's face.
- iv) F is sitting on the right side of G's and its face comes in front of P.

Which of the following pairs are sitting next to each other?

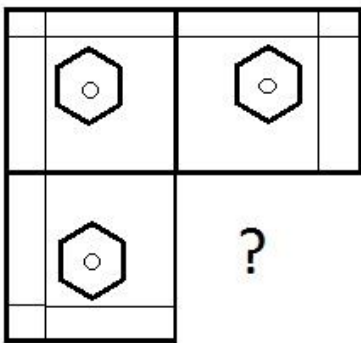
- (A) MF - (Alternative 2)
- (B) PF - (Optional 1)
- (C) HQ - (Optional 3)
- (D) EP - (Optional 4)

Question No.81

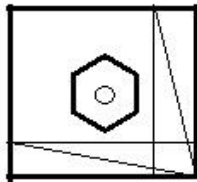
1.00

Bookmark

Select the correct option to complete the image-pattern of a given image.

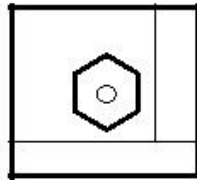


- (A)



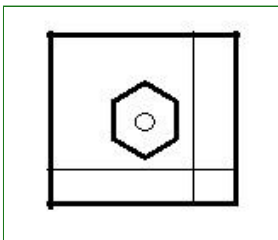
- (Optional 4)

(B)



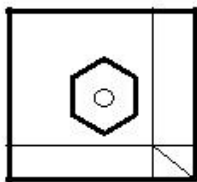
- (Optional 1)

(C)



- (Optional 3)

(D)



- (Optional 2)

Question No.82

1.00

Bookmark

Identify the following numbers in the chain.

92, 85, 114, 107, 136, ?

- (A) 129 - (Alternative 4)
- (B) 165 - (Alternative 2)
- (C) 153 - (Optional 3)
- (D) 143 - (Optional 1)

Question no.83

1.00

Bookmark

In a particular code language WRAP is written as 23181116, how will the word TEXT be written in that language?

- (A) 1852318 - (Alternative 2)
- (B) 2142421 - (Optional 3)
- (C) 2152421 - (Optional 4)
- (D) 2052420 - (Optional 1)

Question no.84

1.00

Bookmark

Considering the logic of the first couple, choose an option that has the same logic in place of the question mark.

21362: 77 :: 41238: ??

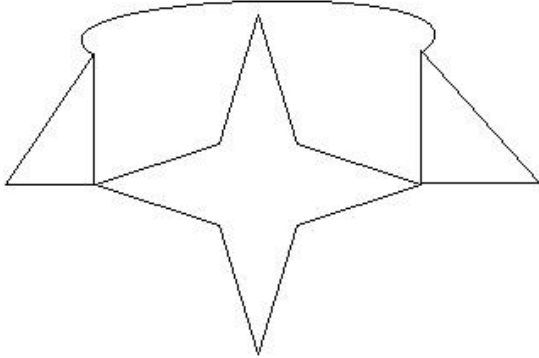
- (A) 66 - (Alternative 4)
(B) 88 - (Alternative 1)
(C) 55 - (Optional 3)
(D) **99 - (Optional 2)**

Question no.85

1.00

Bookmark

How straight lines are there in given figure?



- (A) 8 - (Optional 2)
(B) 4 - (Optional 1)
(C) 12 - (Optional 3)
(D) **14 - (Optional 4)**

Question no.86

1.00

Bookmark

With an annual compound interest rate of 15% per annum (in rupees), get the amount received for a period of 2 years on an amount of 18000 rupees.

- (A) 24805 - (Optional 3)
(B) **23805 - (Alternative 2)**
(C) 25805 - (Optional 4)
(D) 22805 - (Optional 1)

Question No.87

1.00

Bookmark

The price of one metal piece rose from 115 to 138 rupees. Find the percentage of growth. (In%)

- (A) 10 - (Optional 1)
(B) **20 - (Optional 3)**
(C) 25 - (Optional 4)
(D) 15 - (Optional 2)

Question No.88

1.00

Bookmark

When 45342 is divided by 9, what else is left?

- (A) 2 - (Optional 1)
(B) 1 - (Optional 4)
(C) **0 - (Optional 3)**
(D) 4 - (Optional 2)

Question No.89

1.00

Bookmark

Pen, Pencil, and Eraser in a box are in the ratio 3: 2: 1. If the prices of pen, pencil and eraser are 3, 2 and 2, respectively, and the box cost 90, then draw the number of pens in the box.

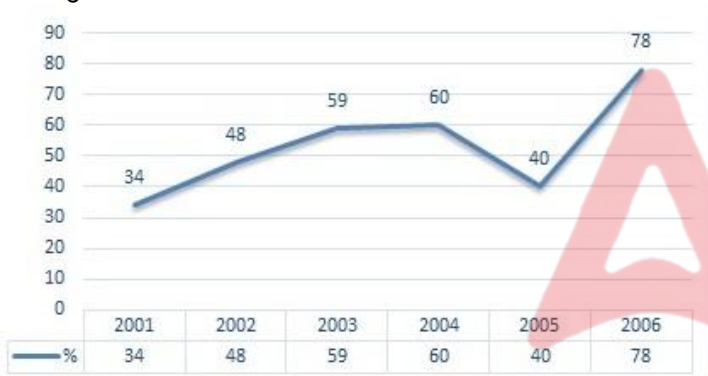
- (A) 17 - (Optional 2)
- (B) 19 - (Optional 4)
- (C) 16 - (Optional 1)
- (D) 18 - (Optional 3)

Question No.90

1.00

Bookmark

Note: The following lines show the percentage of the number of eligible candidates in the examination compared to the total number of candidates present during the six-year period 2001 to 2006. Which pair of below given years had lesser percentage difference in the percentage of candidates who were eligible?



- (A) 2003-2004 - (Optional 3)
- (B) 2004-2005 - (Optional 4)
- (C) 2002-2003 - (Alternative 2)
- (D) 2001-2002 - (Optional 1)

Question No.91

1.00

Bookmark

Give it straightforward:

$$\frac{23 \times 552 \div 24 + 23}{552 \div 23 - 1} = ?$$

- (A) 25 - (Optional 2)
- (B) 23 - (Optional 4)
- (C) 26 - (Optional 1)
- (D) 24 - (Optional 3)

Question No.92

1.00

Bookmark

Ram and Raj's are in the 4: 5 ratio. If the sum of their age is 126, then differentiate them from their age.

- (A) 17 - (Optional 4)
- (B) 15 - (Optional 2)
- (C) 16 - (Optional 3)
- (D) **14 - (Optional 1)**

Question No.93

1.00

Bookmark

Give it straightforward:

$$\frac{5}{4} + \frac{3}{5} - \frac{9}{10} = ?$$

- (A) 0.94 - (Optional 1)
- (B) 0.96 - (Optional 3)
- (C) 0.97 - (Optional 4)
- (D) **0.95 - (Optional 2)**

Question No.94

1.00

Bookmark

Remove the area of the equilateral triangle (cm²) with side length 30cm .

- (A) 224√3 - (Optional 1)
- (B) 226√3 - (Optional 3)
- (C) **225√3 - (Optional 2)**
- (D) 227√3 - (Optional 4)

Question No.95

1.00

Bookmark

The average of 5 numbers is 113, even after one number exceeds the average, the average remains the same. Find out the number dropped out of it.

- (A) 119 - (Alternative 4)
- (B) 117 - (Optional 3)
- (C) 115 - (Optional 2)
- (D) **113 - (Optional 1)**

Question No.96

1.00

Bookmark

Give it straightforward:

$$42 - [9 + \{32 - (22 - 7)\}] = ?$$

- (A) 19 - (Optional 4)
(B) 16 - (Optional 1)
(C) 18 - (Optional 3)
(D) 17 - (Optional 2)

Question No.97

1.00

Bookmark

$x = 0.5747474$, find the fraction of X.

- (A) 567/990 - (Alternative 2)
(B) 568/990 - (Optional 3)
(C) 569/990 - (Alternative 4)
(D) 566/990 - (Optional 1)

Question No.98

1.00

Bookmark

A train takes 27 seconds to complete the signal at one end of the 650 m long bridge. If that train takes 92 seconds to cross that bridge, then take the length of that train. (In meters)

- (A) 270 - (Alternative 4)
(B) 250 - (Optional 2)
(C) 240 - (Optional 1)
(D) 260 - (Alternative 3)

Question No.99

1.00

Bookmark

One shopkeeper bought one item 104 rupees and sold it to 78 rupees. Find the percentage of losses. (In%)

- (A) 25 - (Optional 4)
(B) 10 - (Optional 1)
(C) 15 - (Optional 2)
(D) 20 - (Optional 3)

Question No.100

1.00

Bookmark

A train runs 33m / s faster and in 11 seconds she will cross a signal. Then draw the train length. (In meters)

- (A) 363 - (Optional 3)
(B) 353 - (Alternative 2)
(C) 373 - (Alternative 4)
(D) 343 - (Alternative 1)

Question No.101

1.00

Bookmark

The price of LPG cylinders has increased from Rs 456 to Rs 570. What percentage of consumption should be used to reduce the amount spent on LPG cylinders? (In%)

- (A) 15 - (Optional 3)
- (B) 20 - (Optional 4)
- (C) 5 - (Optional 1)
- (D) 10 - (Optional 2)

Question No.102

1.00

Bookmark

Interest earned after investing in a common interest for 5 years at a rate of 12% per annum is Rs. 3720. So find the amount invested (in rupees).

- (A) 6300 - (Optional 2)
- (B) 6500 - (Optional 4)
- (C) 6400 - (Alternative 3)
- (D) 6200 - (Optional 1)

Question No.103

1.00

Bookmark

The width of a rectangle is 35 cm and its ear is 91cm. Then draw its perimeter. (in cm)

- (A) 218 - (Optional 1)
- (B) 248 - (Alternative 4)
- (C) 228 - (Alternative 2)
- (D) 238 - (Optional 3)

Question No.104

1.00

Bookmark

Find the largest number that can run in 54 and 81.

- (A) 6 - (Optional 4)
- (B) 27 - (Optional 1)
- (C) 9 - (Optional 2)
- (D) 18 - (Optional 3)

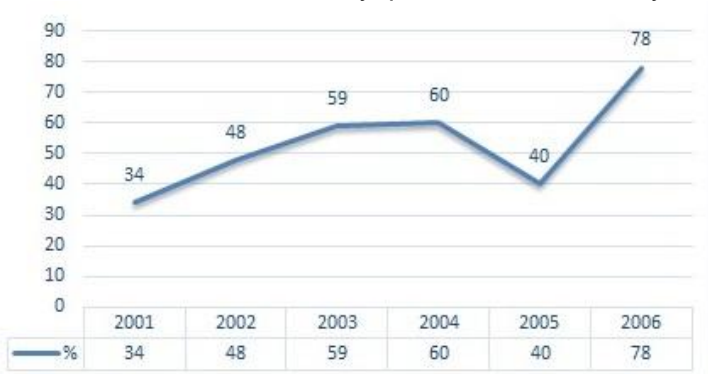
Question No.105

1.00

Bookmark

Note: The following lines show the percentage of the number of eligible candidates in the examination compared to the total number of candidates present during the six-year period 2001 to 2006.

If the total number of candidates present in 2003 and 2005 was more than 85000, then the total number of students who were collectively qualified in both these years was _____.



- (A) 80000 - (Optional 2)
- (B) Information Not Enough - (Alternative 1)

- (C) 45500 - (Optional 4)
(D) 47500 - (Optional 3)

Question No.106

1.00

Bookmark

A specific amount is divided into 2 parts in 6: 5 ratio. If the first part is 48 rupees, then the total amount (in rupees) is drawn.

- (A) 77 - (Optional 1)
(B) **88 - (Alternative 2)**
(C) 99 - (Optional 3)
(D) 66 - (Alternative 4)

Question No.107

1.00

Bookmark

Remove the area of the rhombus that is 25cm and the circumference of 26cm length (in cm^2).

- (A) **325 - (Optional 1)**
(B) 355 - (Optional 4)
(C) 345 - (Optional 3)
(D) 335 - (Alternative 2)

Question No.108

1.00

Bookmark

When an item is sold to 117 rupees, there is a 10% loss on it. Remove the purchase price (in rupees) of that item.

- (A) 140 - (Alternative 2)
(B) 160 - (Optional 4)
(C) **130 - (Optional 1)**
(D) 150 - (Optional 3)

Question No.109

1.00

Bookmark

The sides of a quadrangle are 2: 3: 4: 5 in the ratio and the perimeter is 112 cm. Find the smallest side. (in cm)

- (A) **16 - (Optional 3)**
(B) 18 - (Optional 4)
(C) 12 - (Optional 1)
(D) 14 - (Optional 2)

Question No.110

1.00

Bookmark

A shopkeeper bought an item 80 rupees and sold it for 100 rupees. Find the percentage of profit. (In%)

- (A) 20 - (Optional 2)
(B) 15 - (Optional 1)
(C) **25 - (Optional 3)**
(D) 30 - (Optional 4)

Question No.111

1.00

Bookmark

To win a competition, Sawami needs an average of 80 marks in four exams. Her marks in the first three exams are 68, 78 and 88. How many points should she get in the fourth test to win the competition?

- (A) 86 - (Alternative 2)
- (B) 90 - (Alternative 4)
- (C) 88 - (Optional 3)
- (D) 84 - (Alternative 1)

Question no.112

1.00

Bookmark

The average weight of eleven players' state-level cricket team is 70 kg. When the weight of the trainers is added to it, the average weight increases by 1 kg. What is the weight of the trainers? (In Kg)

- (A) 82 - (Alternative 1)
- (B) 88 - (Alternative 4)
- (C) 84 - (Alternative 2)
- (D) 86 - (Optional 3)

Question no.113

1.00

Bookmark

Note: The following lines show the percentage of the number of eligible candidates in the examination compared to the total number of candidates present during the six-year period 2001 to 2006. If the number of eligible candidates in 2002 was 72000, what was the number of candidates who were present in 2002?



- (A) 130000 - (Alternative 2)
- (B) 150000 - (Optional 4)
- (C) 120000 - (Optional 1)
- (D) 140000 - (Optional 3)

Question no.114

1.00

Bookmark

Sebastian Fétél completes the first round of the race at 240 kmph and completes the second round at 360 kmph speed. Take the average speed of the first two rounds. (in kmph)

- (A) 277 - (Optional 1)
- (B) 299 - (Optional 3)
- (C) 288 - (Alternative 2)
- (D) 311 - (Alternative 4)

Question No.115

1.00

Bookmark

There are 60 detergent soap in one box, 36 of them are used. So what is the percentage of the remaining detergent soaps in the box? (In%)

- (A) 40 - (Optional 2)
- (B) 30 - (Optional 1)
- (C) 50 - (Optional 3)
- (D) 60 - (Optional 4)

Question no.116

1.00

Bookmark

Remove the amount of money (in rupees) after investing on a simple issue of Rs. 7400 / - for 12 years at the rate of 12% per annum for 4 years.

- (A) 10952 - (Optional 4)
- (B) 10852 - (Optional 3)
- (C) 10752 - (Alternative 2)
- (D) 10652 - (Optional 1)

Question No.117

1.00

Bookmark

Give it straightforward:

$$(x^3) \div 23 = 529$$

- (A) 22 - (Optional 1)
- (B) 25 - (Optional 4)
- (C) 24 - (Optional 3)
- (D) 23 - (Optional 2)

Question No.118

1.00

Bookmark

Which one of the following is a full square?

- (A) 5329 - (Optional 2)
- (B) 5327 - (Optional 3)
- (C) 5322 - (Optional 1)
- (D) 5328 - (Optional 4)

Question No.119

1.00

Bookmark

25% of the 66.67% of 75% of the 80% of a number is 4617. So what would be 40% of that number?

- (A) 18468 - (Optional 1)
- (B) 18668 - (Optional 3)
- (C) 18568 - (Alternative 2)
- (D) 18768 - (Optional 4)

Question No.120

1.00

Bookmark

The printed price of a book is 700 rupees, the book manufacturer has given 10% discount on it. If he still earns 20% profit then what will be the basic cost of books (in rupees)?

- (A) 515 - (Optional 1)
- (B) **525 - (Alternative 2)**
- (C) 535 - (Optional 3)
- (D) 545 - (Optional 4)

