

# **RPF Constable**

**Previous Year Paper 08  
Feb 2019 Shift 2**

**Adda247**

# Test Prime

**ALL EXAMS,  
ONE SUBSCRIPTION**



**70,000+**  
Mock Tests



**Personalised  
Report Card**



**Unlimited  
Re-Attempt**



**600+**  
Exam Covered



**Previous Year  
Papers**



**500%**  
Refund



**ATTEMPT FREE MOCK NOW**

Roll No: **D**

Registration No:

Name:

Date: **08-Feb-2019**

Examination: **Online Examination - Constable**

**Section 1 - Online Examination**

**Question No.1**

1.00

Bookmark

Which of the following organizations regulates the Olympic Games?

- (A)  Regional Olympic Association - (Alternative 1)  
(B)  Indian Olympic Commission - (Alternative 2)  
(C)  European Olympic Council - (Alternative 4)  
(D)  **International Olympic Committee - (Alternative 3)**

**Question No.2**

1.00

Bookmark

It is said to end the session of Parliament indefinitely

- (A)  Session - (Alternative 3)  
(B)  Suspension - (Alternative 1)  
(C)  Closing Proposal - (Optional 4)  
(D)  **Suspension for indefinitely - (Alternative 2)**

**Question No.3**

1.00

Bookmark

Azad Hind Fauj was also known as \_\_\_\_\_

- (A)  East India Association - (Alternative 3)  
(B)  **Indian National Army - (Alternative 4)**  
(C)  Indian National Congress - (Alternative 2)  
(D)  Theosophical Society - (Alternative 1)

**Question No.4**

1.00

Bookmark

\_\_\_\_\_ are small balloon-shaped structures and which have the least route in the respiratory system

- (A)  Diaphragm - (Alternative 2)  
(B)  Bronchi - (Alternative 1)  
(C)  **Alveoli - (Alternative 3)**  
(D)  Bronchioles - (Alternative 4)

**Question No.5**

1.00

Bookmark

Which of the following players is associated with billiards / snooker?

- (A)  **Pankaj Advani - (Alternative 4)**  
(B)  P.V. Indus - (Alternative 1)

- (C) Mithali Raj - (Alternative 3)  
(D)  Neeraj Chopra - (Alternative 2)

**Question No.6**

1.00

**Bookmark** 

Which of the following is the only continent through which the equator, cancer line and Makkar line passes?

- (A)  Australia - (Alternative 4)  
(B)  **Africa - (Alternative 2)**  
(C)  Asia - (Alternative 1)  
(D)  South America - (Alternative 3)

**Question No.7**

1.00

**Bookmark** 

India receives \_\_\_\_\_ place in Commonwealth Games 2018's overall medal tally

- (A)  Tenth - (Optional 4)  
(B)  **Third - (Optional 1)**  
(C)  Sixth - (Optional 3)  
(D)  First - (Optional 2)

**Question No.8**

1.00

**Bookmark** 

Who founded the Young Bengal Movement?

- (A)  **Henry Derrio - (Alternative 3)**  
(B)  Bipin Chandra Pal - (Alternative 4)  
(C)  Rabindranath Tagore - (Alternative 1)  
(D)  A.O. Hume - (Alternative 2)

**Question No.9**

1.00

**Bookmark** 

In \_\_\_\_\_, Local Hurricane Noor Westers is also known as Bardoli Chirah

- (A)  Odisha - (Alternative 3)  
(B)  **Assam - (Alternative 2)**  
(C)  Bihar - (Alternative 4)  
(D)  Arunachal Pradesh - (Alternative 1)

**Question No.10**

1.00

**Bookmark** 

Ore mined from earth are contaminated by impurities like soil, sand etc. What are they called?

- (A)  Freon's - (Optional 4)  
(B)  **Gang - (Alternative 1)**  
(C)  Oxide - (Alternative 2)  
(D)  Gases - (Alternative 3)

**Question No.11**

1.00

**Bookmark**

Which of the following is the supreme commander of the Indian Defense Forces?

- (A)  Prime Minister - (Alternative 2)
- (B)  **President - (Alternative 1)**
- (C)  Chief of the Army - (Alternative 3)
- (D)  Cabinet Secretary - (Alternative 4)

**Question No.12**

1.00

Bookmark

In which country did Mahatma Gandhi establish the Natal Congress in 1895?

- (A)  Canada - (Alternative 3)
- (B)  India - (Alternative 4)
- (C)  **South Africa - (Alternative 2)**
- (D)  United States - (Alternative 1)

**Question No.13**

1.00

Bookmark

When both sides agree to buy and buy one another's goods, it is called

- (A)  **Double combinations of requirements - (Optional 4)**
- (B)  Disagreement - (Alternative 3)
- (C)  Mutual Funds - (Alternative 1)
- (D)  Currency Exchange - (Alternative 2)

**Question No.14**

1.00

Bookmark

Which cricketer has left the captaincy of the Australian cricket team after the ball-tampering issue?

- (A)  Michael Clarke - (Alternative 4)
- (B)  George Bailey - (Alternative 2)
- (C)  Adam Gilchrist - (Alternative 1)
- (D)  **Steve Smith - (Optional 3)**

**Question No.15**

1.00

Bookmark

Which of the following is used in the manufacture of sodium components such as borax?

- (A)  **Washing Soda - (Alternative 2)**
- (B)  Finole - (Alternative 4)
- (C)  Tripotation Phosphate - (Alternative 1)
- (D)  Bleaching Powder - (Alternative 3)

**Question No.16**

1.00

Bookmark

Basilica of Bom Jesus, a world heritage site, is located?

- (A)  **Goa - (Alternative 1)**
- (B)  Diu - (Alternative 2)
- (C)  Chandigarh - (Alternative 3)
- (D)  Pondicherry - (Alternative 4)

Question no.17

1.00

Bookmark 

Which of the following Biosphere Reserve (Biosphere Protected Areas) has been recognized by UNESCO on the World Network of Biosphere Reserves?

- (A)  Cold desert (Alternative 1)
- (B)  Resting Mountain - (Alternative 4)
- (C)  **Sunderban - (Alternative 3)**
- (D)  Manas - (Alternative 2)

Question No.18

1.00

Bookmark 

As two separate countries, India and Pakistan separated under \_\_\_\_\_

- (A)  Government of India Act, 1919 - (Alternative 1)
- (B)  Government of India Act, 1935 - (Alternative 4)
- (C)  **Indian Independence Act, 1947 - (Alternative 2)**
- (D)  Government of India Act, 1909 - (Alternative 3)

Question No.19

1.00

Bookmark 

The smallest blood vessels have a cell wall thickness called

- (A)  Platelets - (Alternative 3)
- (B)  **Capillaries - (Alternative 1)**
- (C)  Organ - (Alternative 2)
- (D)  Tissue - (Alternative 4)

Question No.20

1.00

Bookmark 

The Sonapani glacier is situated in which of the following states of India?

- (A)  Uttarakhand - (Alternative 2)
- (B)  Jharkhand - (Alternative 1)
- (C)  **Himachal Pradesh - (Alternative 3)**
- (D)  Sikkim - (Alternative 4)

Question no.21

1.00

Bookmark 

Which Constitution was started in the world with the introduction?

- (A)  Irish Constitution - (Alternative 4)
- (B)  **American Constitution - (Alternative 2)**
- (C)  British Constitution - (Alternative 1)
- (D)  Constitution of India - (Alternative 3)

Question no.22

1.00

Bookmark 

Cedar, which is a highly valuable region, is mainly produced in which region?

- (A)  Eastern Ghats - (Alternative 2)
-

- (B) Western Ghats - (Alternative 3)  
(C)  Vindhya Mountains - (Alternative 4)  
(D)  **Western Himalayas - (Alternative 1)**

Question no.23

1.00

Bookmark

National Planning Committee was established by the Indian National Congress in \_\_\_\_ years.

- (A)  1950 - (Alternative 2)  
(B)  1920 - (Alternative 1)  
(C)  **1938 - (Optional 3)**  
(D)  1947 - (Alternative 4)

Question no.24

1.00

Bookmark

Constitution of India was adopted on \_\_\_\_\_ date

- (A)  January 27, 1960 - (Alternative 1)  
(B)  October 30, 1954 - (Optional 4)  
(C)  **November 26, 1949 - (Optional 3)**  
(D)  August 15, 1947 - (Alternative 2)

Question No.25

1.00

Bookmark

A segment of DNA that provides information to a protein, is called the \_\_\_\_\_ of that protein

- (A)  **Gene - (Alternative 4)**  
(B)  Heredity - (Alternative 1)  
(C)  Enzyme - (Alternative 2)  
(D)  Chromosome - (Alternative 3)

Question no.26

1.00

Bookmark

Which of the following river delta does not make?

- (A)  **Mandvi - (Alternative 4)**  
(B)  Kaveri - (Alternative 1)  
(C)  Ganga - (Alternative 2)  
(D)  Godavari - (Alternative 3)

Question no.27

1.00

Bookmark

The Khilafat movement is related to which of the following movement?

- (A)  Quit India Movement - (Alternative 4)  
(B)  Swadeshi Movement - (Alternative 3)  
(C)  **Non-Cooperation Movement - (Optional 1)**  
(D)  Civil Disobedience Movement - (Alternative 2)

Question no.28

1.00

Bookmark

Who led the British company army in Plassey's war?

- (A)  Thomas Row - (Alternative 3)
- (B)  James Mill - (Alternative 1)
- (C)  **Robert Clive - (Alternative 2)**
- (D)  Francisco de Almeida - (Alternative 4)

**Question no.29**

1.00

Bookmark

Which of the following comes under "Jumping events" in sports and sports?

- (A)  Shot Put (Shot) - (Optional 3)
- (B)  100m Sprint - (Optional 1)
- (C)  Discus Throw - (Alternative 4)
- (D)  **Bamboo Jump (Pole Vault) - (Optional 2)**

**Question No.30**

1.00

Bookmark

Who won the Wimbledon Open 2018 men's singles title?

- (A)  **Novak Djokovic - (Alternative 1)**
- (B)  David Ferrer - (Alternative 3)
- (C)  Rafael Nadal - (Alternative 4)
- (D)  Leander Paes - (Alternative 2)

**Question No.31**

1.00

Bookmark

Which of the following temples is also known as "Black Pagoda"?

- (A)  Vishwanath Temple in Khajuraho - (Alternative 3)
- (B)  Beaches of Mahabalipuram (Shore) Temple - (Alternative 2)
- (C)  **Sun Temple - (Alternative 4)**
- (D)  Jagannath Temple - (Alternative 1)

**Question No.32**

1.00

Bookmark

Which of the following are the rings around the planet?

- (A)  Mars - (Alternative 4)
- (B)  Earth - (Alternative 3)
- (C)  Pluto - (Alternative 1)
- (D)  **Saturn - (Alternative 2)**

**Question No.33**

1.00

Bookmark

When was the capital of India moved from Calcutta to Delhi?

- (A)  1939 - (Alternative 4)
- (B)  1927 - (Optional 3)
- (C)  1905 - (Optional 1)
- (D)  **1911 - (Alternative 2)**



## Question No.34

1.00

Bookmark 

Is related to article 352\_\_\_\_\_ of Indian Constitution

- (A)  Budget - (Optional 4)
- (B)  **National Emergency - (Alternative 2)**
- (C)  All India Services - (Alternative 1)
- (D)  Money Bill - (Alternative 3)

## Question No.35

1.00

Bookmark 

Which of these countries separates the Gibraltar Strait from Spain?

- (A)  Libya - (Alternative 2)
- (B)  Tunisia - (Alternative 3)
- (C)  Egypt - (Alternative 4)
- (D)  **Morocco - (Alternative 1)**

## Question No.36

1.00

Bookmark 

What is the speed of light while traveling in a vacuum?

- (A)   $8 \times 10^9 \text{ ms}^{-1}$  - (Optional 1)
- (B)   $5 \times 10^8 \text{ ms}^{-1}$  - (Optional 3)
- (C)   **$3 \times 10^8 \text{ ms}^{-1}$  - (Alternative 4)**
- (D)   $6 \times 10^8 \text{ ms}^{-1}$  - (Alternative 2)

## Question No.37

1.00

Bookmark 

Panchayati raj generally refers to the system of local self-government in India, it started in a \_\_\_\_\_ by a constitutional amendment

- (A)  1997 - (Alternative 4)
- (B)  **1992 - (Alternative 3)**
- (C)  1983 - (Alternative 1)
- (D)  1989 - (Alternative 2)

## Question No.38

1.00

Bookmark 

What do you mean by an atheist state?

- (A)  Monotheism Abrahamism - (Alternative 2)
- (B)  All Religious - (Optional 1)
- (C)  **Anti-religion (Alternative 3)**
- (D)  Protestant Debate - (Alternative 4)

## Question No.39

1.00

Bookmark 

Which peak (peak) is also called K2?

- (A)  Godwin Austen - (Alternative 2)
- (B)  Nanga Parbat - (Alternative 4)
- (C)  Everest - (Alternative 3)
- (D)  Kanchenjunga - (Alternative 1)

**Question No.40**

1.00

Bookmark 

Where is dryland soil found in the following areas of India?

- (A)  Brahmaputra Plain - (Alternative 3)
- (B)  Ganga Plain - (Alternative 4)
- (C)  Western Rajasthan - (Alternative 2)
- (D)  Himachal Pradesh - (Alternative 1)

**Question No.41**

1.00

Bookmark 

Which rate indicates the ratio of children who died before one year of age per 1000 live children in that particular year?

- (A)  Infant Mortality - (Alternative 2)
- (B)  Literacy rate - (Optional 1)
- (C)  Mortality rate - (Optional 3)
- (D)  Birth rate - (Optional 4)

**Question No.42**

1.00

Bookmark 

What is the unit of frequency?

- (A)  Joule - (Alternative 3)
- (B)  Henry - (Alternative 2)
- (C)  Faraday - (Alternative 1)
- (D)  Hertz - (Alternative 4)

**Question No.43**

1.00

Bookmark 

Which of the following ration cards is issued to the poorest of India?

- (A)  BPL Card - (Optional 1)
- (B)  APL Card - (Optional 3)
- (C)  Antyoday Card - (Alternative 2)
- (D)  White (White) Card - (Optional 4)

**Question no.44**

1.00

Bookmark 

Harappa civilization emerged on the banks of which river?

- (A)  Indus - (Alternative 3)
- (B)  Ganga - (Alternative 1)
- (C)  Yamuna - (Alternative 2)
- (D)  Sutlej - (Alternative 4)

## Question No.45

1.00

Bookmark 

Peacock Throne (Frames Tauce) was built during whose time?

- (A)  **Shah Jahan - (Alternative 2)**  
(B)  Aurangzeb - (Alternative 3)  
(C)  Akbar - (Alternative 1)  
(D)  Jahangir - (Alternative 4)

## Question No.46

1.00

Bookmark 

Which of the following programs provides state-of-the-art central assistance to basic services such as primary health, primary education, rural shelter, rural drinking water and rural electrification?

- (A)  Swarnjayanti Gram Swarozgar Yojana (SGSY) - (Alternative 3)  
(B)  Prime Minister Jan Dhan Yojana (PMJDY) - (Alternative 2)  
(C)  **Prime Minister Gramodaya Yojana (PMGY) - (Alternative 1)**  
(D)  Antyodaya Anna Yojana (AAY) - (Alternative 4)

## Question no.47

1.00

Bookmark 

Who is the head of the Council of Ministers?

- (A)  **प्रधानमंत्री - (Alternative 4)**  
(B)  President - (Alternative 1)  
(C)  Governor - (Alternative 3)  
(D)  Attorney General of India - (Alternative 2)

## Question no.48

1.00

Bookmark 

What is the procedure of coating with a thin layer of zinc to protect steel and iron from corrosion?

- (A)  Ionization - (Optional 1)  
(B)  Oxidation - (Alternative 4)  
(C)  Upset - (Alternative 2)  
(D)  **Galvanization - (Alternative 3)**

## Question No.49

1.00

Bookmark 

The word 'Democracy' is derived from \_\_\_\_\_

- (A)  English words - (Alternative 4)  
(B)  **Greek words - (Optional 1)**  
(C)  Latin words - (Alternative 3)  
(D)  French word - (Alternative 2)

## Question No.50

1.00

Bookmark 

What is the difference in the flow of electrons in the driver only when there is a difference in electrical pressure?

- (A)  Power Difference - (Alternative 4)

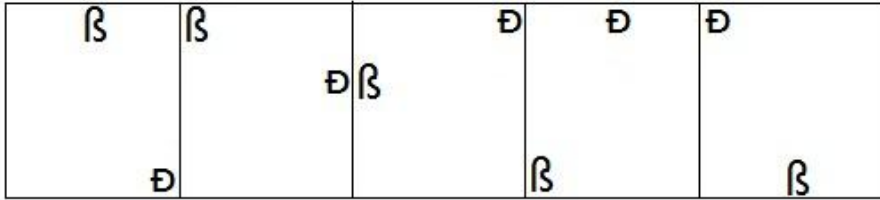
- (B)  Power difference - (Alternative 1)
- (C)  Impact difference - (Alternative 2)
- (D)  Walt Difference - (Alternative 3)

Question No.51

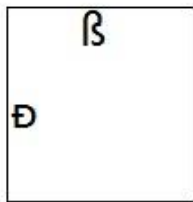
1.00

Bookmark

Which of the options given for the given series will be the next picture?

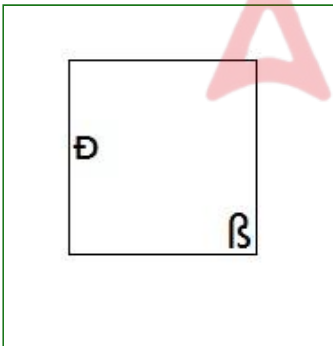


- (A)



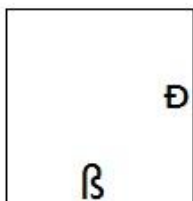
- (Optional 4)

- (B)



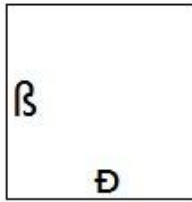
- (Optional 2)

- (C)



- (Optional 1)

- (D)



- (Optional 3)

**Question No.52**

1.00

Bookmark

According to the logic used in the first pair, replace the question mark with the appropriate option given to

34125: 609 :: 25764: ??

- (A)  996 - (Optional 1)
- (B)  998 - (Optional 2)
- (C)  999 - (Optional 3)
- (D)  990 - (Alternative 4)

**Question No.53**

1.00

Bookmark

According to the logic used in the first pair, replace the question mark with the appropriate option  
Pistol: Bullet :: Bow: ??

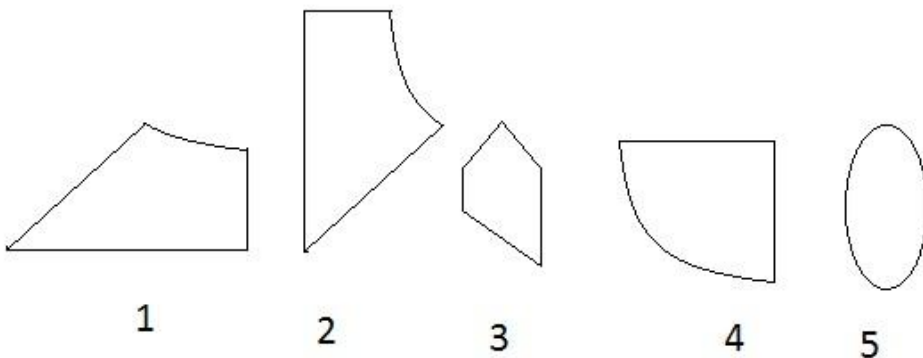
- (A)  Arrow - (Alternative 4)
- (B)  Tea - (Alternative 1)
- (C)  Coffee - (Alternative 3)
- (D)  Pencil - (Alternative 2)

**Question No.54**

1.00

Bookmark

Select the correct option from the following options which could create a full square (3 out of 5 images below):



- (A)  1,4 and 5 - (Optional 1)
- (B)  1,2 and 4 - (Optional 4)
- (C)  1,3 and 5 - (Optional 2)
- (D)  1,2 and 5 - (Optional 3)

## Question no.55

1.00

Bookmark 

Carefully read the given information and then answer the given question.

4 people Pinky, Kadir, Ritesh and Shiny are sitting in the front of a line (not necessarily in this order). Each of them has a favorite subject. I.e. economics, chemistry, geography and civics.

- i) Kadir and who like civics, are neighbors.
- ii) Riteish does not like civics and Shinee does not like economics.
- iii) which economics likes and who likes geography are sitting at the extreme end of the line.
- iv) Riteish is sitting in the second position on the right side of geography.

What kind of civics do you like?

- (A)  **Shiney - (Alternative 4)**
- (B)  Pinky - (Alternative 1)
- (C)  Riteish - (Alternative 2)
- (D)  Qadir - (Alternative 3)

## Question no.56

1.00

Bookmark 

In this question, there are three statements showing the relationship, after which i, ii and iii have been given three conclusions. Assuming that the given statements are true, find out which conclusions are definitely true /.

Statement:  $C = O \geq N$ ;  $N \geq F > I$ ;  $I < R \leq M$

Conclusion:

- i)  $M > F$
  - ii)  $F < C$
  - iii)  $O \geq F$
- (A)  Only i) - (Optional 1)
- (B)  Only ii) and iii) - (Optional 2)
- (C)  **Only iii) - (Optional 3)**
- (D)  All Follow - (Optional 4)

## Question no.57

1.00

Bookmark 

Identify the image of the image given in the question with the following options:

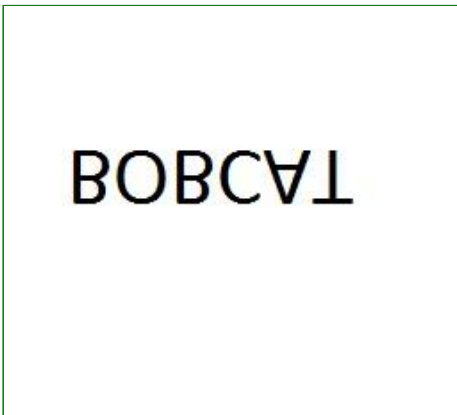
**BOBCAT**

- (A)

BOBCAT

- (Optional 3)

(B)



- (Optional 4)

(C)

BOBCAT

- (Optional 1)

(D)

TACBOB

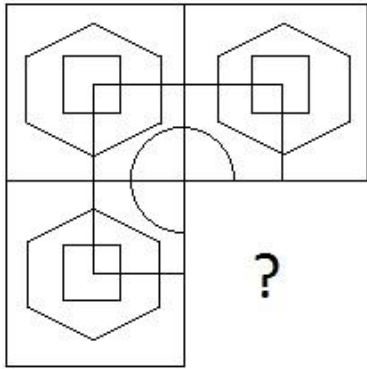
- (Optional 2)

Question no.58

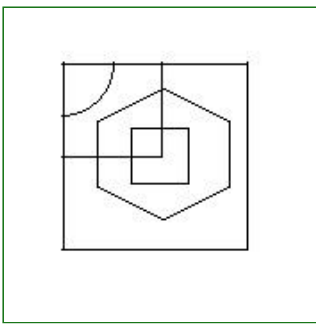
1.00

Bookmark

Choose the correct option that can meet the image pattern of the given image.

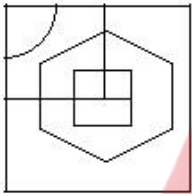


(A)



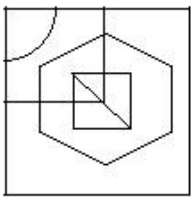
- (Optional 3)

(B)



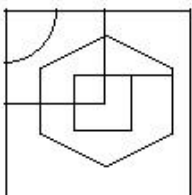
- (Optional 1)

(C)



- (Optional 4)

(D)



- (Optional 2)



Find the next number in this series.

8, 33, 58, 83, 108, ?

- (A)  120 - (Optional 1)  
(B)  132 - (Alternative 3)  
(C)  130 - (Alternative 2)  
(D)  **133 - (Optional 4)**

**Question No.60**

1.00

Bookmark

A quote is given in this question after which a statement has been given. Read the quotation carefully and determine the statement based on the given quotation.

Amazon has acknowledged a case of data breach (data secrecy rule violation) related to highlighting users' names and email IDs, without giving details about the nature or scope of the event. However, the company has not disclosed the total number of users affected by the violation. An email has been sent to all affected users, which notifies them only about technical error. And now, this e-commerce giant is reportedly offering gift cards as compensation to their data breach victims. Seattle headquarters e-commerce company has also offered gift cards between \$ 5 to \$ 100 for some of those users who have been affected by this violation.

A publication citing an email correspondence between Amazon and the customer, Paul Gagnon said that when he called the customer service desk of the company and questioned the leaked data, the company would give him a promotional certificate worth \$ 100. Offered. When Gaganone could not be told about the data being leaked, then he was offered a \$ 100 apology apology. Many people affected by Breach filed a complaint with the company but none of them got any response from the company till now. It is being said that Amazon customers' supervisors have been instructed to comment on any kind of compensation or not to offer compensation to affected Amazon users.

Statement: All people affected by Data Breach have registered a complaint with the Service Desk.

Choose the appropriate option from one of the following options

A-Quote is definitely true.

B - The statement is probably true.

C-statement can not be determined.

D-statement is definitely false.

- (A)  B - (Alternative 2)  
(B)  **D - (Alternative 4)**  
(C)  C - (Alternative 3)  
(D)  A - (Alternative 1)

**Question No.61**

1.00

Bookmark

In any code language, if HOLY is coded as 8151225, what will be the code of RULE in that language?

- (A)  **1821125 - (Optional 3)**  
(B)  1721125 - (Optional 1)  
(C)  1720225 - (Optional 2)  
(D)  1820125 - (Optional 4)

**Question No.62**

1.00

Bookmark

Carefully read the given information and then answer the given question.

4 people Pinky, Kadir, Ritesh and Shiny are sitting in the front of a line (not necessarily in this order). Each of them has a favorite subject. Economics, chemistry, geography and civics.

- i) Kadir and who like civics, are neighbors.
- ii) Riteish does not like civics and Shinee does not like economics.
- iii) which economics likes and who likes geography are sitting at the extreme end of the line.
- iv) Riteish is sitting in the second position on the right side of geography.

Which of the following statements is wrong with the system?

- (A)  Pinky holds the left third position of Qadir - (Alternative 4)
- (B)  **Pinkie likes geography - (Alternative 3)**
- (C)  Ritesh and Kadir are not neighbors - (Alternative 1)
- (D)  Shiny civics likes - (Alternative 2)

**Question No.63**

1.00

Bookmark

In any code language, if HEAVY is coded as KHVYB, what will be the code of FRONT in that language?

- (A)  **IUJQW - (Optional 2)**
- (B)  IVRQW - (Optional 4)
- (C)  IURQW - (Alternative 3)
- (D)  IVJQW - (Optional 1)

**Question No.64**

1.00

Bookmark

Carefully read the given information and then answer the given question.

4 people Pinky, Kadir, Ritesh and Shiny are sitting in the front of a line (not necessarily in this order). Each of them has a favorite subject. I.e. economics, chemistry, geography and civics.

- i) Kadir and who like civics, are neighbors.
- ii) Riteish does not like civics and Shinee does not like economics.
- iii) which economics likes and who likes geography are sitting at the extreme end of the line.
- iv) Riteish is sitting in the second position on the right side of geography.

Who sits between Shiny and Pinky?

- (A)  Which Citizen Loves - (Alternative 1)
- (B)  Which Economics Loves - (Alternative 4)
- (C)  **Riteish - (Alternative 3)**
- (D)  Pinky - (Alternative 2)

**Question No.65**

1.00

Bookmark

If a mirror is placed on the shaded line, which of the following options is the correct image of the given shape?

MONKEY 

(A)  MONKEY - (Optional 3)

(B)  MONKEA - (Optional 2)

(C)  MONKEY - (Optional 4)

(D)  MONKEY - (Optional 1)

Question No.66

1.00

Bookmark

Four of the following five are somehow similar and therefore create a group. What is the one who does not come in this group?

US, TW, XV, OM, SQ

- (A)  OM - (Optional 3)
- (B)  SQ - (Optional 4)
- (C)  XV - (Alternative 1)
- (D)  TW - (Alternative 2)

Question No.67

1.00

Bookmark

Along with the logic used in the first pair, replace the question mark with the appropriate choice  
Jasmine: Flower :: Mango: ??

- (A)  Student - (Optional 3)  
(B)  Rain - (Alternative 1)  
(C)  River - (Alternative 4)  
(D)  **Fruit - (Alternative 2)**

**Question No.68**

1.00

Bookmark 

Find the next number in this series.  
8, 40, 80, 400, 800,?

- (A)  **4000 - (Optional 3)**  
(B)  5000 - (Optional 4)  
(C)  3000 - (Alternative 2)  
(D)  2000 - (Optional 1)

**Question No.69**

1.00

Bookmark 

In this question, after a statement i and ii two conclusions have been given. Considering the fact given in the statement together, consider both the findings simultaneously and decide on which one of them follows beyond the rationally and reasonable doubt based on the information given in the statement.

Statement: Government is supplying free medicines from 2014 and 75 thousand people have benefitted from this till now, although the size of affected population is 100 times this number.

Conclusion:

- i) The number of affected people is higher than the beneficiaries.  
ii) The government has to spread awareness about this scheme because most people are unaware of it.

Choose one of the following options

- (A) only follows the conclusions i  
(B) only follows conclusion ii  
(C) either i or ii follows  
(D) neither i nor ii follows  
(E) both i and ii follow

- (A)  B - (Alternative 2)  
(B)  **A - (Alternative 1)**  
(C)  C - (Alternative 3)  
(D)  D - (Alternative 4)

**Question No.70**

1.00

Bookmark 

Find the next number in this series.  
58, 56, 53, 48, 41,?

- (A)  20 - (Optional 3)  
(B)  10 - (Optional 4)  
(C)  **30 - (Optional 1)**

(D)  31 - (Alternative 2)

**Question No.71**

1.00

Bookmark

Four of the following five are somehow similar and therefore create a group. What is the one who does not come in this group?

Disgusting, Delicious, Nasty, Loathsome, Hateful

- (A)  Nasty - (Alternative 2)
- (B)  Loathsome - (Alternative 3)
- (C)  **Delicious - (Optional 1)**
- (D)  Hateful - (Optional 4)

**Question No.72**

1.00

Bookmark

Find the next number in this series.

17, 38, 69, 90, 121, ?

- (A)  152 - (Optional 4)
- (B)  132 - (Alternative 3)
- (C)  **142 - (Alternative 2)**
- (D)  140 - (Optional 1)

**Question No.73**

1.00

Bookmark

According to the logic used in the first pair, replace the question mark with the appropriate option

P: W :: A: ??

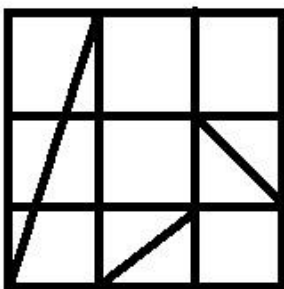
- (A)  G - (Alternative 2)
- (B)  F - (Optional 1)
- (C)  **H - (Alternative 3)**
- (D)  I - (Optional 4)

**Question No.74**

1.00

Bookmark

How many right angled triangles can be made from the given image?



- (A)  8 - (Optional 3)
- (B)  **10 - (Optional 2)**
- (C)  7 - (Optional 4)

(D)  5 - (Optional 1)

**Question No.75**

1.00

Bookmark

A is the only son of PK Dada (Grandfather)'s only son. How is P related to A?

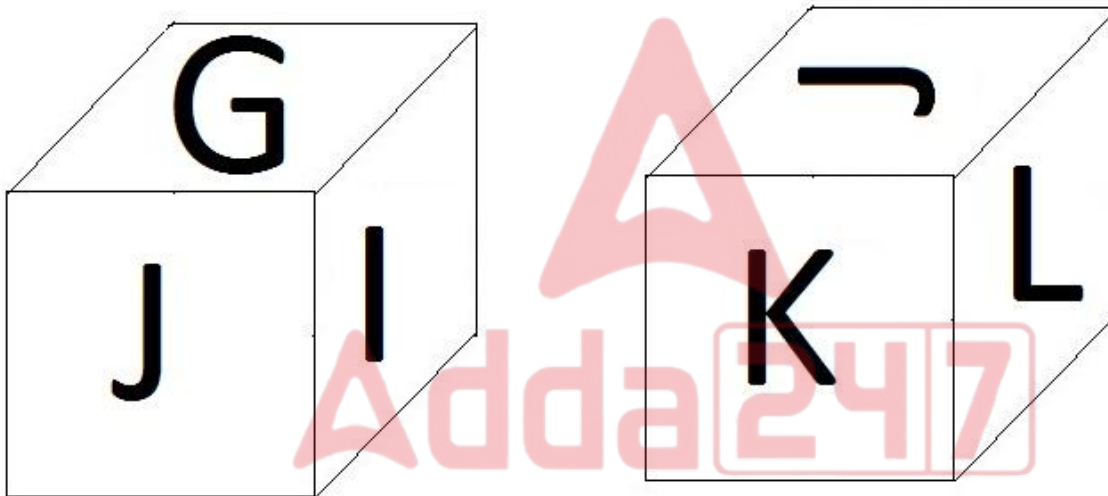
- (A)  Brother - (Alternative 2)
- (B)  Sister - (Alternative 1)
- (C)  Nice - (Alternative 4)
- (D)  Cage - (Alternative 3)

**Question No.76**

1.00

Bookmark

As shown in the given image, each side of the dice has been printed with 6 letters G, H, I, J, K and L. Which letter is printed on the opposite side of G?



- (A)  L - (Alternative 1)
- (B)  I - (Optional 2)
- (C)  J - (Alternative 3)
- (D)  K - (Optional 4)

**Question No.77**

1.00

Bookmark

Read the following statements and answer the following question.

A4B means A is the mother of A,

A3B means A is the father

of A, B is

A5B means A is sister of A, A7B means that A is the brother of A, in the

equation P5Q5R3S, what is the type from P, S Related?

- (A)  Sister - (Alternative 2)
- (B)  Uncle - (Alternative 3)
- (C)  Mother - (Alternative 4)
- (D)  Aunt - (Alternative 1)

## Question No.78

1.00

Bookmark 

A quote is given in this question after which a statement has been given. Read the quotation carefully and determine the statement based on the given quotation.

Amazon has acknowledged a case of data breach (data secrecy rule violation) related to highlighting users' names and email IDs, without giving details about the nature or scope of the event. However, the company has not disclosed the total number of users affected by the violation. An email has been sent to all affected users, which notifies them only about technical error. And now, this e-commerce giant is reportedly offering gift cards as compensation to their data breach victims. The Seattle headquarters e-commerce company has also offered gift cards between \$ 5 to \$ 100 for some of those users, who have been affected by this violation.

A publication citing an email correspondence between Amazon and the customer, Paul Gagnon said that when he called the customer service desk of the company and questioned the leaked data, the company would give him a promotional certificate worth \$ 100. Offered. When Gaganone could not be told about the data being leaked, then he was offered a \$ 100 apology apology. Many people affected by Breach filed a complaint with the company but none of them got any response from the company till now. It is being said that Amazon customer service supervisors have been instructed to comment on or not to offer any kind of compensation to affected Amazon users. "

Statement: Data Breach exposes the user name and email id of all Amazon users. .

Choose the appropriate option from one of the following options

A-Quote is definitely true.

B - The statement is probably true.

C-statement can not be determined.

D-statement is definitely false.

- (A)  B - (Alternative 2)  
 (B)  A - (Alternative 1)  
 (C)  C - (Alternative 3)  
 (D)  D - (Alternative 4)

## Question No.79

1.00

Bookmark 

In this question, the relation between the various elements is shown in the statement. After the statement, two conclusions have been given:

Statement:  $C > O \geq U = R < S \leq E$

Conclusion:

i)  $E > U$

ii)

Select the appropriate one of the following options

- (A) only follows the conclusions i  
 (B) Only conclusions follow ii  
 (C) either i or ii follows  
 (d) neither i nor ii follows  
 (i) both i and ii follow "

- (A)  D - (Alternative 4)  
 (B)  B - (Alternative 2)  
 (C)  A - (Alternative 1)  
 (D)  C - (Alternative 3)

Question No. 80

1.00

Bookmark

In this question, three conclusions have been given after three conclusions. Considering the fact given in the statement together, consider both the findings simultaneously and decide on which one of them follows beyond the rationally and reasonable doubt based on the information given in the statement.

Statement: There are some radio televisions. All television transistors are there. There are some transistor tools.

Conclusion:

- i) There are some transistor radio.
- ii) There are some television equipment.
- iii) There are some radio equipment.

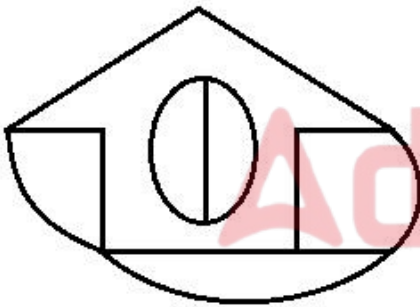
- (A)  Only i) - (Optional 1)
- (B)  Only i) and iii) - (Optional 2)
- (C)  Only ii) and iii) - (optional 3)
- (D)  All Follow - (Optional 4)

Question No.81

1.00

Bookmark

How straight lines are there in the given image?



- (A)  12 - (Optional 3)
- (B)  11 - (Optional 1)
- (C)  10 - (Optional 4)
- (D)  13 - (Optional 2)

Question No.82

1.00

Bookmark

In this question, after two statements i and ii two conclusions have been given. Considering the fact given in the statement together, consider both the findings simultaneously and decide on which one of them follows beyond the rationally and reasonable doubt based on the information given in the statement.

Statement: All are cups of cups. There is no mug Jag Jagan.

Conclusion:

- i) There are some cup mugs.
- ii) There is no cup of junk.

Choose the appropriate one of the following options



- (A) only follows the conclusions i
- (B) Only conclusions follow ii
- (C) either i or ii follows
- (D) neither i nor ii follows
- (E) both i and ii follow

- (A)  **A - (Alternative 1)**
- (B)  B - (Alternative 2)
- (C)  E - (Alternative 4)
- (D)  C - (Alternative 3)

**Question no.83**

1.00

Bookmark

Pointing to a boy, one person said, "He is the brother of the daughter of my mother's father's son."  
How is the man related to the boy?

- (A)  Uncle - (Alternative 4)
- (B)  Brother - (Alternative 1)
- (C)  **Cage - (Alternative 2)**
- (D)  Nephew - (Alternative 3)

**Question no.84**

1.00

Bookmark

Four of the following five are somehow similar and therefore create a group. What is the one who does not come in this group?  
U, V, P, S, T

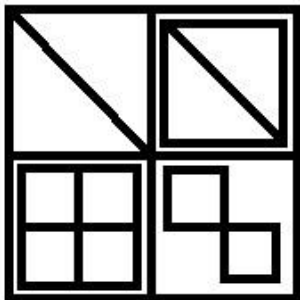
- (A)  T - (Alternative 4)
- (B)  V - (Alternative 2)
- (C)  **S - (Alternative 1)**
- (D)  P - (Alternative 3)

**Question no.85**

1.00

Bookmark

How many classes are there in the given image?



- (A)  11 - (Optional 4)
- (B)  8 - (Optional 3)
- (C)  **13 - (Optional 1)**

(D)  10 - (Optional 2)

**Question no.86**

1.00

Bookmark

Solve:

$$45 - [68 - (135 \div 9 - (25 - 60 \div 3) \div 5)]$$

- (A)  -9 - (Optional 2)  
(B)  9 - (Optional 3)  
(C)  18 - (Optional 1)  
(D)  -18- (Alternative 4)

**Question No.87**

1.00

Bookmark

The printed value on the book is Rs 4200, a book seller offers a 10% discount on it. If he still earns 20% profit, then the purchase price of the book (in rupees) is

- (A)  3,150 - (Optional 1)  
(B)  3,350 - (Optional 3)  
(C)  3,450 - (Optional 4)  
(D)  3,250 - (Optional 2)

**Question no.88**

1.00

Bookmark

$X = 0.6565656565 \dots$  Get a different X

- (A)  65/99 - (Optional 2)  
(B)  66/99 - (Optional 3)  
(C)  621/900 - (Alternative 4)  
(D)  65/900 - (Optional 1)

**Question No.89**

1.00

Bookmark

Instructions:

Study the following graphs and answer the question based on this.

From 2001 to 2006, the number of vehicles manufactured by X and Y companies (in thousands)

make the difference between the total production of both companies in the given years.



- (A)  141 - (Alternative 2)
- (B)  143 - (Optional 3)
- (C)  145 - (Optional 4)
- (D)  **139 - (Optional 1)**

**Question No.90**

1.00

Bookmark

Instructions:

Study the following graphs and answer the question based on this.

From 2001 to 2006, the number of vehicles manufactured by X and Y companies (in thousands)

is the difference between the number of vehicles manufactured by the X company in 2001 and 2002?



- (A)  5 - (Optional 3)
- (B)  3 - (Optional 1)
- (C)  6 - (Optional 4)
- (D)  **4 - (Optional 2)**

**Question No.91**

1.00

Bookmark

The average weight of eleven players' state-level cricket team is 105 kg. When the coach is added,

the average weight increases to 1 kg. What is the weight of the coach? (in kg)

- (A)  117 - (Alternative 2)
- (B)  121 - (Alternative 4)
- (C)  115 - (Optional 1)
- (D)  119 - (Optional 3)

**Question No.92**

1.00

Bookmark

The width of a rectangle is 210 cm and its diagonal is 546 cm. Describe its dimensions. (in cm)

- (A)  1628 - (Optional 2)
- (B)  1428 - (Optional 4)
- (C)  1728 - (Optional 1)
- (D)  1528 - (Optional 3)

**Question No.93**

1.00

Bookmark

Explain the area of the equilateral triangle whose side (side) is 100 cm. (in  $\text{cm}^2$ )

- (A)   $2560\sqrt{3}$  - (Optional 4)
- (B)   $2540\sqrt{3}$  - (Optional 1)
- (C)   $2520\sqrt{3}$  - (Optional 3)
- (D)   $2500\sqrt{3}$  - (Optional 2)

**Question No.94**

1.00

Bookmark

Interest earned after 5 years on a simple interest of 12% per annum is 5,820 rupees. Tell the amount invested. (In rupees)

- (A)  9,700 - (Optional 3)
- (B)  9,600 - (Optional 1)
- (C)  9,650 - (Optional 2)
- (D)  9,750 - (Optional 4)

**Question No.95**

1.00

Bookmark

To be successful in the competition, Jermilin needs an average score of 75 in four examinations. His score in the first three examinations is 76, 72 and 68. What to score in the fourth test to be successful in the competition?

- (A)  90 - (Alternative 4)
- (B)  88 - (Optional 3)
- (C)  84 - (Alternative 1)
- (D)  86 - (Alternative 2)

**Question No.96**

1.00

Bookmark

Solve:

$$(43 \times 9 \times 43 \times 9) \div (2(\sqrt{81 \div 2}))^2$$

- (A)  1329 - (Optional 3)  
(B)  1849 - (Alternative 4)  
(C)  1549 - (Alternative 2)  
(D)  2439 - (Optional 1)

**Question No.97**

1.00

**Bookmark** 

The ratio of alpha and beta to age is 2: 5. If the sum total of his age is 266, then tell the difference between his age.

- (A)  114 - (Optional 4)  
(B)  120 - (Optional 1)  
(C)  118 - (Alternative 2)  
(D)  116 - (Optional 3)

**Question No.98**

1.00

**Bookmark** 

The first lap of the Franklin race completes 590 kmph and the second lap of the race completes at 885 kmph. First find the average speed of both laps. (mph in-mile per hour)

- (A)  717 - (Optional 4)  
(B)  714 - (Optional 3)  
(C)  708 - (Optional 1)  
(D)  711 - (Alternative 2)

**Question No.99**

1.00

**Bookmark** 

One shopkeeper bought one thing for Rs 415 and sold it for Rs 332. Tell the shopkeeper the loss percentage. (% In)

- (A)  30 - (Optional 3)  
(B)  25 - (Optional 2)  
(C)  20 - (Optional 1)  
(D)  35 - (Optional 4)

**Question No.100**

1.00

**Bookmark** 

Trains running at 55 meters / second cross a signal in 13 seconds. Find out the length of the train (in meters)

- (A)  719 - (Alternative 3)  
(B)  711 - (Optional 1)  
(C)  715 - (Alternative 2)  
(D)  723 - (Alternative 4)

Question No.101

1.00

Bookmark

The ratio of arms to a quadratic area is 2: 3: 4: 5 and the perimeter is 602 cm. Describe the smallest arm. (In cm)

- (A)  90 - (Alternative 4)
- (B)  88 - (Optional 3)
- (C)  86 - (Alternative 2)
- (D)  84 - (Alternative 1)

Question No.102

1.00

Bookmark

Get the value of X:

$$\sqrt{40-x} = \sqrt{218 + \sqrt{49}}$$

- (A)  185 - (Alternative 2)
- (B)  -210 - (Optional 4)
- (C)  -185 - (Optional 1)
- (D)  210 - (Optional 3)

Question No.103

1.00

Bookmark

The smallest number of two numbers (LCM) is 168 and their maximum consonant (HCF) is 12. If a number is 12, find the second number.

- (A)  144 - (Optional 2)
- (B)  96 - (Optional 3)
- (C)  168 - (Optional 1)
- (D)  18 - (Optional 4)

Question No.104

1.00

Bookmark

What will be the amount after the period of 2 years at the compound interest rate of 10% per annum at 17100 rupees? (In rupees)

- (A)  22,691 - (Optional 3)
- (B)  23,691 - (Optional 4)
- (C)  20,691 - (Optional 1)
- (D)  21,691 - (Optional 2)

Question No.105

1.00

Bookmark

25% of 66.67% of 75% of 80% of a number is 6353. Get 40% of that number

- (A)  25412 - (Optional 3)
- (B)  23412 - (Optional 1)
- (C)  26412 - (Optional 4)
- (D)  24412 - (Optional 2)

## Question No.106

1.00

Bookmark 

A certain amount is divided into 2 parts in the ratio of 6: 5. If the first part is 258 rupees. Find the total amount. (In rupees)

- (A)  493 - (Optional 3)  
(B)  473 - (Optional 1)  
(C)  503 - (Optional 4)  
(D)  483 - (Alternative 2)

## Question No.107

1.00

Bookmark 

One shopkeeper bought one thing from Rs 224 and sold it for 280 rupees. Explain the profit percentage earned by the shopkeeper.

- (A)  25 - (Optional 2)  
(B)  20 - (Optional 1)  
(C)  30 - (Optional 3)  
(D)  35 - (Optional 4)

## Question No.108

1.00

Bookmark 

The price of LPG cylinder has increased from Rs 672 to Rs 840. What percentage of consumption should be reduced that the amount spent on LPG cylinders remains the same. (% In)

- (A)  20 - (Optional 1)  
(B)  30 - (Optional 3)  
(C)  35 - (Optional 4)  
(D)  25 - (Optional 2)

## Question No.109

1.00

Bookmark 

What is the amount of money invested after 4 years at the rate of simple interest of 13% per annum invested at 4,900 rupees? (In rupees)

- (A)  7,448 - (Optional 1)  
(B)  7,468 - (Optional 3)  
(C)  7,478 - (Optional 4)  
(D)  7,458 - (Optional 2)

## Question no.110

1.00

Bookmark 

90 out of a box of 125 detergent soaps is used. What percentage of the detergent soap is left in the box? (% In)

- (A)  32 - (Optional 3)  
(B)  30 - (Alternative 2)  
(C)  28 - (Optional 1)  
(D)  34 - (Alternative 4)

## Question No.111

1.00

Bookmark 

When an item is sold for Rs. 476, it is a loss of 15%. Describe the purchase price of the item. (In rupees)

- (A)  500 - (Optional 1)  
(B)  520 - (Alternative 2)  
(C)  540 - (Optional 3)  
(D)  **560 - (Alternative 4)**

Question no.112

1.00

Bookmark 

The average of 7 numbers is 148. By removing a number, the average remains the same. Describe the extracted number.

- (A)  156 - (Optional 1)  
(B)  152 - (Optional 3)  
(C)  **148 - (Alternative 4)**  
(D)  154 - (Optional 2)

Question No.113

1.00

Bookmark 

The ratio of pen, pencil and eraser to a box is 3, 2: 1. If pen, pencil and eraser prices are Rs. 3, 2 rupees and 2 rupees respectively and the amount spent on the box is Rs. 615, find out the number of pen in the box.

- (A)  125 - (Alternative 2)  
(B)  **123 - (Optional 1)**  
(C)  127 - (Optional 3)  
(D)  129 - (Alternative 4)

Question No.114

1.00

Bookmark 

The value of the piece of metal has increased from Rs 385 to Rs 462. Show the percentage increase. (% In)

- (A)  30 - (Optional 4)  
(B)  25 - (Optional 3)  
(C)  **20 - (Optional 2)**  
(D)  15 - (Optional 1)

Question No.115

1.00

Bookmark 

Which of the following is divisible by 15?

- (A)  11935 - (Alternative 2)  
(B)  12835 - (Optional 4)  
(C)  11735 - (Optional 1)  
(D)  **11835 - (Optional 3)**

Question no.116

1.00



Bookmark

Solve:

$$\sqrt{(70+\sqrt{(138-\sqrt{(262+\sqrt{729}))})})}$$

- (A)  7 - (Optional 3)
- (B)  15 - (Optional 1)
- (C)  12 - (Optional 2)
- (D)  9 - (Optional 4)

Question No.117

1.00

Bookmark

If the 5824 is divided by 9, then what will be the remaining?

- (A)  2 - (Optional 2)
- (B)  4 - (Optional 3)
- (C)  5 - (Optional 4)
- (D)  1 - (Optional 1)

Question no.118

1.00

Bookmark

Instructions:

Study the following graphs and answer the question based on this.

From 2001 to 2006, the number of vehicles manufactured by X and Y companies (in thousands)

during which years was the difference between production of company X and company Y?



- (A)  2005 - (Alternative 4)
- (B)  2003 - (Alternative 2)
- (C)  2004 - (Alternative 3)
- (D)  2002 - (Alternative 1)

Question No.119

1.00

Bookmark

Describe the area of the rhombus whose diagonal is 95 cm and 96 cm. (in  $\text{cm}^2$ )

- (A)  4360 - (Optional 1)  
(B)  4560 - (Optional 3)  
(C)  4660 - (Alternative 4)  
(D)  4450 - (Alternative 2)

**Question No.120**

1.00

**Bookmark** 

A train takes 38 seconds to cross a signal, which is at one end of a bridge of 473 meters long. If the train takes 81 seconds to cross the bridge, then find the length of the train. (In meters)

- (A)  418 - (Optional 1)  
(B)  438 - (Optional 3)  
(C)  428 - (Optional 2)  
(D)  448 - (Alternative 4)

