

Exam Date	02/08/2022
Exam Time	9:00 AM - 10:00 AM
Subject	Selection Post Phase X Matriculation Level

Section : General Intelligence

Q.1 Which of the following numbers will replace the question mark (?) in the given series?
16, 18, 24, 36, ?, 86

- Ans
- 1. 76
 - 2. 56
 - 3. 46
 - 4. 66

Question ID : 26433056441
Status : Answered
Chosen Option : 2

Q.2 In a certain code language, 'PEOPLE' is written as '5' and 'ACADEMIC' is written as '7'.
How will 'PRESIDENT' be written in that language?

- Ans
- 1. 7
 - 2. 9
 - 3. 6
 - 4. 8

Question ID : 26433056574
Status : Not Answered
Chosen Option : --

Q.3 Study the given pattern carefully and select the number that can replace the question mark (?) in it.
First row: 61, 21, 185
Second row: 43, 26, 164
Third row: 39, 16, ?
(NOTE : Operations should be performed on the whole numbers, without breaking down the numbers into its constituent digits. E.g. 13 – Operations on 13 such as adding/deleting/multiplying etc. to 13 can be performed. Breaking down 13 into 1 and 3 and then performing mathematical operations on 1 and 3 is not allowed)

- Ans
- 1. 156
 - 2. 144
 - 3. 123
 - 4. 126

Question ID : 26433068250
Status : Answered
Chosen Option : 4

Q.4 Which of the given letter-clusters will replace the question mark (?) in the following series?
CEYS, EIAV, GMCY, ?, KUGE

- Ans
- 1. IRGB
 - 2. JRGB
 - 3. JQEB
 - 4. IQEB

Question ID : 26433056131
Status : Answered
Chosen Option : 4

Q.5 Two statements are given, followed by two conclusions numbered I and II. Assuming the statements to be true, even if they seem to be at variance with commonly known facts, decide which of the conclusions logically follow(s) from the statements.

Statements:

Some games are toys.

All blocks are games.

Conclusions:

I. Some blocks are toys.

II. All blocks are toys.

- Ans
- 1. Neither conclusion I nor II follows
 - 2. Both conclusions I and II follow
 - 3. Only conclusion I follows
 - 4. Only conclusion II follows

Question ID : 26433055215
Status : Answered
Chosen Option : 1

Q.6 Select the option that represents the letters that, when sequentially placed from left to right in the following blanks, will complete the letter-series.

P O _ _ Y _ _ I U Y _ O I _ Y P O _ U _

- Ans
- 1. IOPUPIY
 - 2. IOPUPOIY
 - 3. IUPOPIY
 - 4. UIPOPIY

Question ID : 26433056147
Status : Answered
Chosen Option : 3

Q.7 Select the option that is related to the fifth letter-cluster in the same way as the second letter-cluster is related to the first letter-cluster and the fourth letter-cluster is related to the third letter-cluster.

FEUDALS : DUEFSLA :: FREIGHT : IERFTHG :: QUARTER : ?

- Ans
- 1. RUAQRET
 - 2. RAUQERT
 - 3. RACQUET
 - 4. RAUQRET

Question ID : 26433056180
Status : Answered
Chosen Option : 4

Q.8 Which letter cluster will replace the question mark (?) to complete the given series?
CURE, EXUG, ?, IDAK, KGDM

- Ans
- 1. HMTR
 - 2. GAXI
 - 3. HCYJ
 - 4. HAXI

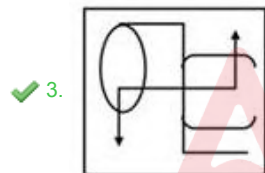
Question ID : 26433056236
Status : Answered
Chosen Option : 2

Q.9 Select the option figure in which the given figure (X) is embedded as its part (rotation is NOT allowed).



(X)

Ans



Question ID : 26433056113
Status : Answered
Chosen Option : 3

Q.10 In a code language, 'MOBILE' is written as '8\$2%£@', 'DRAPE' is written as '9#+ ■ @' and 'CRUEL' is written as '6#3@£'. How will 'CRAMP' be written in that language?

- Ans
- ✓ 1. 6#+8 ■
 - ✗ 2. 93@8 ■
 - ✗ 3. 93@%£
 - ✗ 4. 6#+%£

Question ID : 26433055266
Status : Not Answered
Chosen Option : --

Q.11 Which two signs should be interchanged to make the given equation correct?
 $63 - 3 + 45 \div 15 \times 2 = 36$

- Ans
- ✗ 1. + and ×
 - ✓ 2. - and +
 - ✗ 3. + and ×
 - ✗ 4. × and -

Question ID : 26433056848
Status : Answered
Chosen Option : 2

Q.12 In a certain code language, 'NOVEL' is written as 'SSYGM', and 'MUSIC' is written as 'RYVKD'. How will 'ORDER' be written in that language?

- Ans
- ✗ 1. TVGGT
 - ✓ 2. TVGGS
 - ✗ 3. TVGHT
 - ✗ 4. TVGHS

Question ID : 26433055695
Status : Answered
Chosen Option : 2

Q.13 Two statements are given, followed by two conclusions numbered I and II. Assuming the statements to be true, even if they seem to be at variance with commonly known facts, decide which of the conclusions logically follow(s) from the statements.

Statements:

Some tunes are songs.

All tunes are melodies.

Conclusions:

I. No song is a melody.

II. All songs are melodies.

- Ans
- ✓ 1. Neither conclusion I nor II follows
 - ✗ 2. Only conclusion II follows
 - ✗ 3. Only conclusion I follows
 - ✗ 4. Both conclusions I and II follow

Question ID : 26433055228
Status : Answered
Chosen Option : 1

Q.14 Two statements are given, followed by two conclusions numbered I and II. Assuming the statements to be true, even if they seem to be at variance with commonly known facts, decide which of the conclusions logically follow(s) from the statements.

Statements:

All planks are woods.

Some woods are glasses

Conclusions:

I. Some planks are glasses.

II. All planks are glasses.

Ans 1. Only conclusion II follows

2. Only conclusion I follows

3. Neither conclusion I nor II follows

4. Both conclusions I and II follow

Question ID : 2643305209

Status : Answered

Chosen Option : 3

Q.15 P & Q' means 'P is the sister of Q'.

'P % Q' means 'P is the brother of Q'.

'P \$ Q' means 'P is the mother of Q'.

'P = Q' means 'P is the father of Q'.

If A = B \$ C & D % E, then how is D related to A?

Ans 1. Son's son

2. Son's daughter

3. Daughter's daughter

4. Daughter's son

Question ID : 26433056419

Status : Answered

Chosen Option : 4

Q.16 In a certain code language, 'ABACUS' is written as 'BCBTVD' and 'GENDER' is written as 'OFHSFE'. How will 'IMPACT' be written in that language?

Ans 1. QJNDBU

2. JBDQNU

3. QNJUDB

4. QUNJDB

Question ID : 26433056407

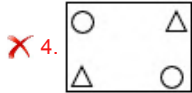
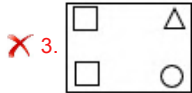
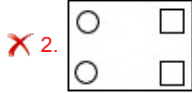
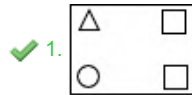
Status : Answered

Chosen Option : 3

Q.17 Select the figure that will replace the question mark (?) in the following figure series.



Ans



Question ID : 26433055717

Status : Answered

Chosen Option : 1

Q.18 Select the option that represents the correct order of the given words as they would appear in an English dictionary.

1. Frame
2. Friction
3. Fraction
4. Freight
5. Fragile
6. Freedom

Ans ✗ 1. 3, 5, 1, 4, 6, 2

✓ 2. 3, 5, 1, 6, 4, 2

✗ 3. 3, 5, 6, 1, 4, 2

✗ 4. 2, 3, 5, 1, 6, 4

Question ID : 26433056720

Status : Answered

Chosen Option : 2

Q.19 Select the option that is related to the third word in the same way as the second word is related to the first word. (The words must be considered as meaningful English words and must not be related to each other based on the number of letters / number of consonants / vowels in the word.)

Bull : Cow :: Cock : ?

Ans ✗ 1. Chick

✗ 2. Duck

✗ 3. Doe

✓ 4. Hen

Question ID : 26433056584

Status : Answered

Chosen Option : 4

Q.20 Select the correct option that indicates the arrangement of the following words in a logical and meaningful order.

- 1.Branches
- 2.Leaves
- 3.Roots
- 4.Stem
- 5.Flowers

- Ans
- 1. 3, 4, 2, 5, 1
 - 2. 3, 4, 1, 2, 5
 - 3. 2, 3, 5, 4, 1
 - 4. 3, 1, 4, 2, 5

Question ID : 26433067756

Status : Answered

Chosen Option : 2

Q.21 In a code language, 'FREQUENT' is written as '6-18-5-17-21-5-14-20' and 'DANGER' is written as '4-1-14-7-5-18'. How will 'SOLITUDE' be written in that language?

- Ans
- 1. 19-15-12-9-21-20-4-5
 - 2. 18-15-12-8-20-21-4-5
 - 3. 18-15-12-19-20-21-4-5
 - 4. 19-15-12-9-20-21-4-5

Question ID : 26433056744

Status : Answered

Chosen Option : 4

Q.22 Pointing to a person in a photograph, a man, Naren, said, "Her daughter's son is my daughter's brother." How is the person related to Naren?

- Ans
- 1. Daughter
 - 2. Sister
 - 3. Mother-in-law
 - 4. Wife

Question ID : 26433055668

Status : Answered

Chosen Option : 3

Q.23 In a code language, 'BURPS' is written as 'DXVUY' and 'TARDEN' is written as 'VDVIKU'. How will 'GUARD' be written in that language?

- Ans
- 1. IYFWK
 - 2. JYEWK
 - 3. JXFVJ
 - 4. IXEWJ

Question ID : 26433055253

Status : Answered

Chosen Option : 4

Q.24 In a certain code language, 'HAPPY' is written as 'JBRQA' and 'MACRO' is written as 'OBESQ'. How will 'MATES' be written in that language?

- Ans
- 1. OBVFV
 - 2. OBVFU
 - 3. OBVGU
 - 4. OBWFU

Question ID : 26433067305
Status : Answered
Chosen Option : 2

Q.25 Which of the following letter-clusters will replace the question mark (?) in the given series to make it logically complete?
PST, MPQ, JMN, GJK, ?

- Ans
- 1. CFG
 - 2. CGH
 - 3. DHG
 - 4. DGH

Question ID : 26433056069
Status : Answered
Chosen Option : 4

Section : English Language

Q.1 Select the most appropriate option to replace the underlined word in the given sentence.

She is so naïve.

- Ans
- 1. gullible
 - 2. meek
 - 3. illiterate
 - 4. silly

Question ID : 26433059997
Status : Answered
Chosen Option : 1

Q.2 Select the option that expresses the given sentence in active voice.

The battery of the car has been used by the boy for his games.

- Ans
- 1. The boy used the battery of the car for his games.
 - 2. The boy has used the battery of the car for his games.
 - 3. The boy might have used the battery of the car for his games.
 - 4. The boy was using the battery of the car for his games.

Question ID : 26433060606
Status : Answered
Chosen Option : 2

Q.3 Select the INCORRECTLY spelt word.

- Ans
- 1. Strength
 - 2. Custom
 - 3. Polution
 - 4. Promise

Question ID : 26433060635
Status : Answered
Chosen Option : 3

Q.4 Select the most appropriate meaning of the given idiom.

Sit tight

- Ans
- 1. Sit straight
 - 2. Be conscious
 - 3. Wait patiently
 - 4. Walk slowly

Question ID : 26433060709
Status : Answered
Chosen Option : 2

Q.5 Select the most appropriate option to fill in the blank.

One should _____ one's promises.

- Ans
- 1. take
 - 2. hide
 - 3. keep
 - 4. give

Question ID : 26433059692
Status : Answered
Chosen Option : 3

Q.6 Select the most appropriate synonym of the given word.

Amaze

- Ans
- 1. Assure
 - 2. Commit
 - 3. Praise
 - 4. Astonish

Question ID : 26433060586
Status : Answered
Chosen Option : 4

Q.7 Parts of the given sentence have been given as options. One of them contains a spelling error. Select the option that rectifies the error.

It is important to immediately report a bullying incident to the trusted elders.

- Ans
- 1. bullying
 - 2. incident
 - 3. immediately
 - 4. trusted

Question ID : 26433059579
Status : Answered
Chosen Option : 2

Q.8 Select the correct meaning of the idiom in bold and italics.

The scheme says nothing new; it doesn't *break new ground*.

- Ans
- 1. To look into your own matter
 - 2. To do something innovative
 - 3. To do something that you should not be doing
 - 4. Out of operational conditions

Question ID : 26433059657
Status : Answered
Chosen Option : 2

Q.9 Select the most appropriate ANTONYM of the given word.

Rarely

- Ans
- 1. Seldom
 - 2. Every time
 - 3. Sometimes
 - 4. Frequently

Question ID : 26433060114
Status : Answered
Chosen Option : 4

Q.10 Select the correctly spelt word to fill in the blank.

Geeta was appointed _____ of Physics in a reputed college in Pune.

- Ans
- 1. Professor
 - 2. Professur
 - 3. Porfessor
 - 4. Profesor

Question ID : 26433060517
Status : Answered
Chosen Option : 1

Q.11 Select the option that expresses the given sentence in direct speech.

The newsreader said that he was there for a heartfelt apology for making such a comment.

- Ans
- 1. The newsreader said, "I have been here for a heartfelt apology for making such a comment."
 - 2. The newsreader said, "I was here for a heartfelt apology for making such a comment."
 - 3. The newsreader said, "I am here for a heartfelt apology for making such a comment."
 - 4. The newsreader said, "I do come here for a heartfelt apology for making such a comment."

Question ID : 26433060616
Status : Answered
Chosen Option : 3

Q.12 Select the most appropriate option that can substitute the underlined words in the given sentence.

In the olden days, most of the groundwater was safe to drink because there was no contamination from industries or sewage.

- Ans
- 1. vulnerable
 - 2. edible
 - 3. useful
 - 4. potable

Question ID : 26433059723
Status : Answered
Chosen Option : 2

Q.13 Select the most appropriate option that can substitute the underlined segment in the given sentence.

The ability to laughter is peculiar to mankind.

- Ans
- 1. ability to laughed
 - 2. ability to laughable
 - 3. ability to laughing
 - 4. ability to laugh

Question ID : 26433059664
Status : Answered
Chosen Option : 4

Q.14 Select the most appropriate option to fill in the blank.

The henna design on her hand was really _____.

- Ans
- 1. reversible
 - 2. solid
 - 3. compatible
 - 4. intricate

Question ID : 26433060087
Status : Answered
Chosen Option : 3

Q.15 Select the most appropriate ANTONYM of the given word.

Prejudice

- Ans
- 1. Preconception
 - 2. Prophecy
 - 3. Influence
 - 4. Fairness

Question ID : 26433060217

Status : Answered

Chosen Option : 3

Comprehension:

In the following passage, some words have been deleted. Read the passage carefully and select the most appropriate option to fill in each blank.

At Ferney, Voltaire entered one of the most active (1) _____ of his life. Both patriarch and lord of the manor, he developed a modern estate, sharing in the movement of agricultural reform in which the aristocracy was interested at the time. He (2) _____ not be true to himself, however, without stirring up village feuds before the magistrates on a question of tithes, as well as about the beating of one of his workmen. He renovated the church and had *Deo erexit* Voltaire (3) _____ on the facade. At Easter Communion, 1762, he delivered a sermon on stealing and drunkenness and repeated this sacrilegious offence in the following year, flouting the prohibition by the bishop of Annecy, in whose jurisdiction Ferney lay. He meddled in Genevan politics, taking the side of the workers, and installed a stocking factory and watchworks on his estate in order to help them. He called for the liberation of serfs in the Jura but without success, though he did succeed in suppressing the customs barrier on the road between Gex in the Jura and Geneva, the natural outlet for the produce of Gex. Such generous interventions in local politics (4) _____ him enormous popularity. In 1777, he received a popular acclamation from the people of Ferney. In 1815, the Congress of Vienna halted the annexation of Ferney to Switzerland in his honour. His fame was now worldwide. 'Innkeeper of Europe'—as he was called—he welcomed such literary figures as James Boswell, Giovanni Casanova, Edward Gibbon, the prince de Ligne, and the fashionable philosophers of Paris. He kept up an (5) _____ correspondence—with the philosophes, with his actresses and actors, and with those high in court circles, such as the duc de Richelieu (grandnephew of the cardinal de Richelieu), the duc de Choiseul, and Mme du Barry, Louis XV's favourite. He renewed his correspondence with Frederick II and exchanged letters with Catherine II of Russia.

SubQuestion No : 16

Q.16 Select the most appropriate option to fill in blank number 1.

- Ans
- 1. period
 - 2. stretch
 - 3. periods
 - 4. day

Question ID : 26433072011

Status : Answered

Chosen Option : 1

Comprehension:

In the following passage, some words have been deleted. Read the passage carefully and select the most appropriate option to fill in each blank.

At Ferney, Voltaire entered one of the most active (1) _____ of his life. Both patriarch and lord of the manor, he developed a modern estate, sharing in the movement of agricultural reform in which the aristocracy was interested at the time. He (2) _____ not be true to himself, however, without stirring up village feuds before the magistrates on a question of tithes, as well as about the beating of one of his workmen. He renovated the church and had Deo erexit Voltaire (3) _____ on the facade. At Easter Communion, 1762, he delivered a sermon on stealing and drunkenness and repeated this sacrilegious offence in the following year, flouting the prohibition by the bishop of Annecy, in whose jurisdiction Ferney lay. He meddled in Genevan politics, taking the side of the workers, and installed a stocking factory and watchworks on his estate in order to help them. He called for the liberation of serfs in the Jura but without success, though he did succeed in suppressing the customs barrier on the road between Gex in the Jura and Geneva, the natural outlet for the produce of Gex. Such generous interventions in local politics (4) _____ him enormous popularity. In 1777, he received a popular acclamation from the people of Ferney. In 1815, the Congress of Vienna halted the annexation of Ferney to Switzerland in his honour.

His fame was now worldwide. 'Innkeeper of Europe'—as he was called—he welcomed such literary figures as James Boswell, Giovanni Casanova, Edward Gibbon, the prince de Ligne, and the fashionable philosophers of Paris. He kept up an (5) _____ correspondence—with the philosophes, with his actresses and actors, and with those high in court circles, such as the duc de Richelieu (grandnephew of the cardinal de Richelieu), the duc de Choiseul, and Mme du Barry, Louis XV's favourite. He renewed his correspondence with Frederick II and exchanged letters with Catherine II of Russia.

SubQuestion No : 17

Q.17 Select the most appropriate option to fill in blank number 2.

Ans ✓ 1. could

✗ 2. will

✗ 3. should

✗ 4. can

Question ID : 26433072012

Status : Answered

Chosen Option : 1

Adda247

Comprehension:

In the following passage, some words have been deleted. Read the passage carefully and select the most appropriate option to fill in each blank.

At Ferney, Voltaire entered one of the most active (1) _____ of his life. Both patriarch and lord of the manor, he developed a modern estate, sharing in the movement of agricultural reform in which the aristocracy was interested at the time. He (2) _____ not be true to himself, however, without stirring up village feuds before the magistrates on a question of tithes, as well as about the beating of one of his workmen. He renovated the church and had Deo erexit Voltaire (3) _____ on the facade. At Easter Communion, 1762, he delivered a sermon on stealing and drunkenness and repeated this sacrilegious offence in the following year, flouting the prohibition by the bishop of Annecy, in whose jurisdiction Ferney lay. He meddled in Genevan politics, taking the side of the workers, and installed a stocking factory and watchworks on his estate in order to help them. He called for the liberation of serfs in the Jura but without success, though he did succeed in suppressing the customs barrier on the road between Gex in the Jura and Geneva, the natural outlet for the produce of Gex. Such generous interventions in local politics (4) _____ him enormous popularity. In 1777, he received a popular acclamation from the people of Ferney. In 1815, the Congress of Vienna halted the annexation of Ferney to Switzerland in his honour.

His fame was now worldwide. 'Innkeeper of Europe'—as he was called—he welcomed such literary figures as James Boswell, Giovanni Casanova, Edward Gibbon, the prince de Ligne, and the fashionable philosophers of Paris. He kept up an (5) _____ correspondence—with the philosophes, with his actresses and actors, and with those high in court circles, such as the duc de Richelieu (grandnephew of the cardinal de Richelieu), the duc de Choiseul, and Mme du Barry, Louis XV's favourite. He renewed his correspondence with Frederick II and exchanged letters with Catherine II of Russia.

SubQuestion No : 18

Q.18 Select the most appropriate option to fill in blank number 3.

- Ans 1. knapped
 2. formed
 3. carved
 4. modelled

Question ID : 26433072013

Status : Answered

Chosen Option : 3

Adda247

Comprehension:

In the following passage, some words have been deleted. Read the passage carefully and select the most appropriate option to fill in each blank.

At Ferney, Voltaire entered one of the most active (1) _____ of his life. Both patriarch and lord of the manor, he developed a modern estate, sharing in the movement of agricultural reform in which the aristocracy was interested at the time. He (2) _____ not be true to himself, however, without stirring up village feuds before the magistrates on a question of tithes, as well as about the beating of one of his workmen. He renovated the church and had Deo erexit Voltaire (3) _____ on the facade. At Easter Communion, 1762, he delivered a sermon on stealing and drunkenness and repeated this sacrilegious offence in the following year, flouting the prohibition by the bishop of Annecy, in whose jurisdiction Ferney lay. He meddled in Genevan politics, taking the side of the workers, and installed a stocking factory and watchworks on his estate in order to help them. He called for the liberation of serfs in the Jura but without success, though he did succeed in suppressing the customs barrier on the road between Gex in the Jura and Geneva, the natural outlet for the produce of Gex. Such generous interventions in local politics (4) _____ him enormous popularity. In 1777, he received a popular acclamation from the people of Ferney. In 1815, the Congress of Vienna halted the annexation of Ferney to Switzerland in his honour.

His fame was now worldwide. 'Innkeeper of Europe'—as he was called—he welcomed such literary figures as James Boswell, Giovanni Casanova, Edward Gibbon, the prince de Ligne, and the fashionable philosophers of Paris. He kept up an (5) _____ correspondence—with the philosophes, with his actresses and actors, and with those high in court circles, such as the duc de Richelieu (grandnephew of the cardinal de Richelieu), the duc de Choiseul, and Mme du Barry, Louis XV's favourite. He renewed his correspondence with Frederick II and exchanged letters with Catherine II of Russia.

SubQuestion No : 19

Q.19 Select the most appropriate option to fill in blank number 4.

- Ans
- 1. netted
 - 2. scored
 - 3. earned
 - 4. accumulated

Question ID : 26433072014

Status : Answered

Chosen Option : 3

Adda247

Comprehension:

In the following passage, some words have been deleted. Read the passage carefully and select the most appropriate option to fill in each blank.

At Ferney, Voltaire entered one of the most active (1) _____ of his life. Both patriarch and lord of the manor, he developed a modern estate, sharing in the movement of agricultural reform in which the aristocracy was interested at the time. He (2) _____ not be true to himself, however, without stirring up village feuds before the magistrates on a question of tithes, as well as about the beating of one of his workmen. He renovated the church and had Deo erexit Voltaire (3) _____ on the facade. At Easter Communion, 1762, he delivered a sermon on stealing and drunkenness and repeated this sacrilegious offence in the following year, flouting the prohibition by the bishop of Annecy, in whose jurisdiction Ferney lay. He meddled in Genevan politics, taking the side of the workers, and installed a stocking factory and watchworks on his estate in order to help them. He called for the liberation of serfs in the Jura but without success, though he did succeed in suppressing the customs barrier on the road between Gex in the Jura and Geneva, the natural outlet for the produce of Gex. Such generous interventions in local politics (4) _____ him enormous popularity. In 1777, he received a popular acclamation from the people of Ferney. In 1815, the Congress of Vienna halted the annexation of Ferney to Switzerland in his honour. His fame was now worldwide. 'Innkeeper of Europe'—as he was called—he welcomed such literary figures as James Boswell, Giovanni Casanova, Edward Gibbon, the prince de Ligne, and the fashionable philosophers of Paris. He kept up an (5) _____ correspondence—with the philosophes, with his actresses and actors, and with those high in court circles, such as the duc de Richelieu (grandnephew of the cardinal de Richelieu), the duc de Choiseul, and Mme du Barry, Louis XV's favourite. He renewed his correspondence with Frederick II and exchanged letters with Catherine II of Russia.

SubQuestion No : 20

Q.20 Select the most appropriate option to fill in blank number 5.

- Ans** 1. enormous
 2. grandiose
 3. infinite
 4. goodly

Question ID : 26433072015

Status : Answered

Chosen Option : 1

Comprehension:

Read the given passage and answer the questions that follow.

Lack of moral values, character-building incentives and good cultural values accounts for the present crisis prevalent in Indian scenario. Today, we find that even the persons in the most powerful positions have become an accomplice of a corrupt culture even though they are well-educated and well-reputed for their scholarship. The tragedy is this that even after independence, Indian society could not lay down the foundations strong enough to evolve an effective leadership which could give a new direction to the people. The perennial fact still remains that no system of government can be successful until strong emphasis is placed on moral values in the society. It can be done through creating a proper climate—an environment where these values can grow fully and are not stifled in the cruel grasp of corruption.

SubQuestion No : 21

Q.21 Select the most appropriate ANTONYM for the following word:

PREVALENT

- Ans** 1. Rare
 2. Pervasive
 3. Nonvalent
 4. Common

Question ID : 26433076142

Status : Answered

Chosen Option : 1

Comprehension:

Read the given passage and answer the questions that follow.

Lack of moral values, character-building incentives and good cultural values accounts for the present crisis prevalent in Indian scenario. Today, we find that even the persons in the most powerful positions have become an accomplice of a corrupt culture even though they are well-educated and well-reputed for their scholarship. The tragedy is this that even after independence, Indian society could not lay down the foundations strong enough to evolve an effective leadership which could give a new direction to the people. The perennial fact still remains that no system of government can be successful until strong emphasis is placed on moral values in the society. It can be done through creating a proper climate—an environment where these values can grow fully and are not stifled in the cruel grasp of corruption.

SubQuestion No : 22

Q.22 Select the most appropriate synonym for the following word:

INCENTIVE

- Ans 1. Extensive
 2. Inducement
 3. Intensive
 4. Strong

Question ID : 26433076141

Status : Answered

Chosen Option : 2

Comprehension:

Read the given passage and answer the questions that follow.

Lack of moral values, character-building incentives and good cultural values accounts for the present crisis prevalent in Indian scenario. Today, we find that even the persons in the most powerful positions have become an accomplice of a corrupt culture even though they are well-educated and well-reputed for their scholarship. The tragedy is this that even after independence, Indian society could not lay down the foundations strong enough to evolve an effective leadership which could give a new direction to the people. The perennial fact still remains that no system of government can be successful until strong emphasis is placed on moral values in the society. It can be done through creating a proper climate—an environment where these values can grow fully and are not stifled in the cruel grasp of corruption.

SubQuestion No : 23

Q.23 Select from among the given options the most appropriate title for the passage.

- Ans 1. Indian Society
 2. Significance of culture
 3. Lack of Moral Values
 4. Cultural System

Question ID : 26433076140

Status : Answered

Chosen Option : 2

Comprehension:

Read the given passage and answer the questions that follow.

Lack of moral values, character-building incentives and good cultural values accounts for the present crisis prevalent in Indian scenario. Today, we find that even the persons in the most powerful positions have become an accomplice of a corrupt culture even though they are well-educated and well-reputed for their scholarship. The tragedy is this that even after independence, Indian society could not lay down the foundations strong enough to evolve an effective leadership which could give a new direction to the people. The perennial fact still remains that no system of government can be successful until strong emphasis is placed on moral values in the society. It can be done through creating a proper climate—an environment where these values can grow fully and are not stifled in the cruel grasp of corruption.

SubQuestion No : 24

Q.24 What is the style used in writing the given passage?

Ans 1. Argumentative

2. Descriptive

3. Narrative

4. Dramatic

Question ID : 26433076143

Status : Answered

Chosen Option : 1

Comprehension:

Read the given passage and answer the questions that follow.

Lack of moral values, character-building incentives and good cultural values accounts for the present crisis prevalent in Indian scenario. Today, we find that even the persons in the most powerful positions have become an accomplice of a corrupt culture even though they are well-educated and well-reputed for their scholarship. The tragedy is this that even after independence, Indian society could not lay down the foundations strong enough to evolve an effective leadership which could give a new direction to the people. The perennial fact still remains that no system of government can be successful until strong emphasis is placed on moral values in the society. It can be done through creating a proper climate—an environment where these values can grow fully and are not stifled in the cruel grasp of corruption.

SubQuestion No : 25

Q.25 Which of the following facts is mentioned in the given passage?

Ans 1. Lack of effective leadership resulted in the failure of Indian society to provide a new direction to its people.

2. For a successful system of governance, moral values are not essential.

3. Moral and cultural values account for the crisis in Indian society.

4. Government is responsible for the moral and cultural behaviour of people.

Question ID : 26433076144

Status : Answered

Chosen Option : 1

Section : Quantitative Aptitude

Q.1 The average marks obtained by 60 students in a certain examination are 35. If the average marks of the students who passed are 39, and that of the students who failed are 15, how many students passed the examination?

Ans 1. 45

2. 50

3. 60

4. 55

Question ID : 26433063847

Status : Answered

Chosen Option : 2

Q.2 Find the difference between compound interest and simple interest for 2 years at 10% p.a. on a sum of Rs.400.

- Ans
- 1. Rs.3
 - 2. Rs.5
 - 3. Rs.4
 - 4. Rs.1

Question ID : 26433063885
Status : Answered
Chosen Option : 3

Q.3 A person buys a ceiling fan for ₹1,600 and sells it at a loss of 18%. What is the selling price of the ceiling fan?

- Ans
- 1. ₹1,314
 - 2. ₹1,316
 - 3. ₹1,312
 - 4. ₹1,310

Question ID : 26433063390
Status : Answered
Chosen Option : 3

Q.4 In an election there were only two candidates. 20% of the voters did not cast their votes and 1000 votes were declared invalid. The winner, by obtaining 70% of the total valid votes, defeated his rival by 1200 votes. The total number of voters in the election was _____.

- Ans
- 1. 5000
 - 2. 6000
 - 3. 7000
 - 4. 8000

Question ID : 26433061195
Status : Answered
Chosen Option : 1

Q.5 The perimeter of a square is 168 metres. What is its area?

- Ans
- 1. 1884 m²
 - 2. 1784 m²
 - 3. 1764 m²
 - 4. 1448 m²

Question ID : 26433063901
Status : Answered
Chosen Option : 3

Q.6 Amit can complete a piece of work in 4 days and Raju can complete the same in 6 days. How long will they take, if both Amit and Raju work together?

Ans

✓ 1. $2\frac{2}{5}$ days

✗ 2. $1\frac{3}{5}$ days

✗ 3. $5\frac{2}{5}$ days

✗ 4. $3\frac{1}{5}$ days

Question ID : 26433061221

Status : Answered

Chosen Option : 1

Q.7 A chair is bought for Rs.800 and sold for Rs.750. Find the loss percentage.

Ans

✗ 1. 62.5%

✗ 2. 7.05%

✓ 3. 6.25%

✗ 4. 5.25%

Question ID : 26433064014

Status : Answered

Chosen Option : 3

Q.8 In an election between two candidates, 90% of the voters cast their votes, out of which 5% of the votes were declared invalid. A candidate got 12825 votes, which were 75% of the total valid votes. Find the total number of voters enrolled in that election.

Ans

✗ 1. 16525

✗ 2. 18000

✗ 3. 15825

✓ 4. 20000

Question ID : 26433071273

Status : Answered

Chosen Option : 4

Q.9 A successive discount of 11%, 10% and 30% is equal to:

Ans

✗ 1. 42.93%

✗ 2. 46.26%

✓ 3. 43.93%

✗ 4. 56.07%

Question ID : 26433061457

Status : Answered

Chosen Option : 3

Q.10 In an election of college students' president, a total of 2500 votes were polled. Akshit, Sumit and Rajni were contesting for the election. 10% of the total votes were rejected due to different reasons. Akshit received half of the votes received by Sumit. The average of Akshit's and Sumit's votes was equal to Rajni's votes. How many votes did Akshit receive?

- Ans
- 1. 1000
 - 2. 500
 - 3. 600
 - 4. 555

Question ID : 26433063304
Status : Answered
Chosen Option : 2

Q.11 Ramesh covered a total distance of 275 km on bike. For the first three hours, his speed was 65 km/h and for the rest of the journey his speed came down to 40 km/h. Find the average speed of the bike.

- Ans
- 1. 55 km/h
 - 2. 65 km/h
 - 3. 75 km/h
 - 4. 45 km/h

Question ID : 26433064960
Status : Answered
Chosen Option : 1

Q.12 The current population of a town is 50,000. If it is growing at 6%, compounded every year, what will be the population of the town after two years?

- Ans
- 1. 56000
 - 2. 56280
 - 3. 56180
 - 4. 56080

Question ID : 26433061215
Status : Answered
Chosen Option : 3

Q.13 The speeds of three cars are in the ratio of 5 : 4 : 3. What is the ratio between the time taken by these cars to cover the same distance?

- Ans
- 1. 10 : 12 : 20
 - 2. 8 : 10 : 12
 - 3. 11 : 15 : 25
 - 4. 12 : 15 : 20

Question ID : 26433064910
Status : Answered
Chosen Option : 4

Q.14 In a discount scheme, there is 35% discount on the marked price of Rs.4,800, but the sale is finalised at Rs.2,184 only. What additional discount did the customer get?

- Ans
- 1. 20%
 - 2. 34%
 - 3. 42%
 - 4. 30%

Question ID : 26433063705
Status : Answered
Chosen Option : 4

Q.15 What is the value of $0.12\bar{3}$ in vulgar fraction?

- Ans
- 1. $\frac{341}{90}$
 - 2. $\frac{111}{900}$
 - 3. $\frac{3444}{900}$
 - 4. $\frac{311}{900}$

Question ID : 26433063288
Status : Answered
Chosen Option : 2

Q.16 The third proportional to 0.009 and 0.6 is:

- Ans
- 1. 0.004
 - 2. 36
 - 3. 40
 - 4. 0.54

Question ID : 26433063712
Status : Answered
Chosen Option : 3

Q.17 60% of the diameter of a hemisphere measures 8.4 cm. What is its volume (in cm^3 , rounded off to the nearest tens)? (Take $\pi = \frac{22}{7}$)

- Ans
- 1. 720
 - 2. 1440
 - 3. 630
 - 4. 840

Question ID : 26433063262
Status : Answered
Chosen Option : 1

Q.18 Sudhir runs a certain distance at a speed of 13km/h for 7 minutes. He again walks for 7 minutes at a speed of 3 km/h. What is his average speed for the whole journey?

- Ans
- 1. 7 km/h
 - 2. 6 km/h
 - 3. 8 km/h
 - 4. 4 km/h

Question ID : 26433063888
Status : Answered
Chosen Option : 3

Q.19 The fourth proportional of 24, 32 and 36 is:

- Ans
- 1. 48
 - 2. 40
 - 3. 45
 - 4. 46

Question ID : 26433064024
Status : Answered
Chosen Option : 1

Q.20 The marked price of mustard oil is 10% more than its cost price. At what per cent less than the marked price should it be sold, to have no profit and no loss?

- Ans
- 1. $9\frac{4}{11}\%$
 - 2. $9\frac{1}{11}\%$
 - 3. $9\frac{3}{11}\%$
 - 4. $9\frac{2}{11}\%$

Question ID : 26433063391
Status : Answered
Chosen Option : 2

Q.21 On what sum of money will the difference between simple interest and compound interest for 2 years at 10% per annum be equal to Rs.250?

- Ans
- 1. Rs.45,000
 - 2. Rs.35,000
 - 3. Rs.20,000
 - 4. Rs.25,000

Question ID : 26433061271
Status : Answered
Chosen Option : 4

Q.22 Ramesh walks a certain distance and rides back in 5 hours 45 minutes. If he could ride both ways in 3 hours 30 minutes, find the time required by Ramesh to walk both ways .

- Ans
- 1. 5 hours
 - 2. 7 hours
 - 3. 6 hours
 - 4. 8 hours

Question ID : 26433064995
Status : Answered
Chosen Option : 4

Q.23 A can work twice as fast as B. If they complete a work together in 18 days, then in how many days will B alone complete the same work?

- Ans
- 1. 58
 - 2. 56
 - 3. 52
 - 4. 54

Question ID : 26433064931
Status : Answered
Chosen Option : 4

Q.24 How many prime numbers are there between 30 to 85?

- Ans
- 1. 12
 - 2. 15
 - 3. 13
 - 4. 14

Question ID : 26433063374
Status : Not Answered
Chosen Option : --

Q.25 In what ratio must sugar at the rate of Rs.41/kg be mixed with sugar at the rate of Rs.55/kg so that the mixture is worth Rs.49/kg?

- Ans
- 1. 5 : 6
 - 2. 2 : 3
 - 3. 3 : 4
 - 4. 4 : 5

Question ID : 26433063917
Status : Answered
Chosen Option : 3

Section : General Awareness

Q.1 What was the name of the mascot of the Paralympics – 2020?

- Ans
- 1. Someity
 - 2. Miraitowa
 - 3. Bing DwenDwen
 - 4. Soohorang

Question ID : 26433054656
Status : Answered
Chosen Option : 2

Q.2 In the temples built by the Gupta rulers in ancient India, which of the following parts was the idol of the main deity installed?

- Ans
- 1. Jagati
 - 2. Shikhara
 - 3. Mandapa
 - 4. Garbhagriha

Question ID : 26433065508
Status : Answered
Chosen Option : 4

Q.3 Western disturbances cause:

- Ans
- 1. rainfall during winters in the north west part of India
 - 2. rainfall during winters in the south part of India
 - 3. rainfall during summers in the north west part of India
 - 4. rainfall during summers in the north east part of India

Question ID : 26433054052
Status : Answered
Chosen Option : 1

Q.4 Bahauddin Dagar is associated with which musical instrument?

- Ans
- 1. Rudra Veena
 - 2. Sitar
 - 3. Flute
 - 4. Sarod

Question ID : 26433054395
Status : Answered
Chosen Option : 4

Q.5 Among the following Sufi saints, whose dargah is located at Ajmer?

- Ans
- 1. Bahauddin Zakariya
 - 2. Moin-ud-din Chishti
 - 3. Fariduddin Ganjshakar
 - 4. Ali Hujwiri

Question ID : 26433065525
Status : Answered
Chosen Option : 2

Q.6 Who was appointed as the Chief Economic Advisor of India in January 2022?

- Ans
- 1. Krishnamurthy Subramanian
 - 2. Dr V Anantha Nageswaran
 - 3. Arvind Subramanian
 - 4. Raghuram Rajan

Question ID : 26433069830
Status : Answered
Chosen Option : 1

Q.7 Which enzyme is present in pancreatic juice?

- Ans
- 1. Bile
 - 2. Pepsin
 - 3. Maltase
 - 4. Amylase

Question ID : 26433076776
Status : Answered
Chosen Option : 4

Q.8 Chemancheri Kunhiraman Nair, born in Kerala, was a _____ dancer.

- Ans
- 1. Mohiniyattam
 - 2. Kathakali
 - 3. Kuchipudi
 - 4. Kathak

Question ID : 26433054136
Status : Answered
Chosen Option : 3

Q.9 The Ryotwari system was started first in which of the following Presidencies of British India?

- Ans
- 1. Bengal
 - 2. Bombay
 - 3. Burma
 - 4. Madras

Question ID : 26433065538
Status : Answered
Chosen Option : 1

Q.10 Cholesterol rich food can lead to:

- Ans
- 1. muscular dystrophy
 - 2. dementia
 - 3. weak bones and muscles
 - 4. cardiovascular disease

Question ID : 26433054033
Status : Answered
Chosen Option : 4

Q.11 Which committee estimated poverty on the basis of nutritional requirements?

- Ans
- 1. Thakurdas Committee
 - 2. Alagh Committee
 - 3. Tendulkar Committee
 - 4. Lakdawala Committee

Question ID : 26433065408
Status : Answered
Chosen Option : 2

Q.12 How many Fundamental Duties are given in the Constitution?

- Ans
- 1. 12
 - 2. 11
 - 3. 10
 - 4. 9

Question ID : 26433054077
Status : Answered
Chosen Option : 2

Q.13 The 'Sepahijala Wildlife Sanctuary' is located in which Indian state?

- Ans
- 1. Uttar Pradesh
 - 2. Karnataka
 - 3. Madhya Pradesh
 - 4. Tripura

Question ID : 26433076760
Status : Answered
Chosen Option : 2

Q.14 In the state assembly elections held in February-March 2022, the Aam Aadmi Party (AAP) formed the government in which of the following states?

- Ans
- 1. Goa
 - 2. Manipur
 - 3. Uttar Pradesh
 - 4. Punjab

Question ID : 26433069797
Status : Answered
Chosen Option : 4

Q.15 In February 2022, which state government tabled a bill in the state assembly that has provisions for up to 10-year jail term and a fine of up to Rs.10 crore for anyone found guilty of leaking question paper in government examinations?

- Ans
- 1. Rajasthan
 - 2. Gujarat
 - 3. Madya Pradesh
 - 4. Maharashtra

Question ID : 26433054430
Status : Answered
Chosen Option : 1

Q.16 The initiative of 'Shatabdi Sankalp' by the government of India is associated with which of the following National festivals?

- Ans
- 1. Gandhi Jayanti
 - 2. Ambedkar Jayanti
 - 3. Republic Day
 - 4. Independence Day

Question ID : 26433054336
Status : Answered
Chosen Option : 4

Q.17 The Dhamek Stupa is located in which Indian state?

- Ans 1. Uttar Pradesh
 2. Arunachal Pradesh
 3. Himachal Pradesh
 4. Bihar

Question ID : 26433054350
Status : Answered
Chosen Option : 4

Q.18 Which of the following festivals is associated with the wedding of Goddess Meenakshi celebrated majorly in Tamil Nadu?

- Ans 1. Bihula
 2. Porag
 3. Saga Dawa
 4. Chithirai

Question ID : 26433054154
Status : Answered
Chosen Option : 1

Q.19 What was India's sex ratio in 1951?

- Ans 1. 930 females per 1000 males
 2. 943 females per 1000 males
 3. 929 females per 1000 males
 4. 946 females per 1000 males

Question ID : 26433065394
Status : Answered
Chosen Option : 2

Q.20 The Great Bath of Mohenjo-Daro was built with which material?

- Ans 1. Marble
 2. Brick
 3. Sandstone
 4. Granite

Question ID : 26433054353
Status : Answered
Chosen Option : 3

Q.21 Which of the following is an autobiography of the Indian politician Lal Krishna Advani?

- Ans 1. Unbreakable
 2. Wandering in Many Worlds
 3. My Country My Life
 4. One Life Is Not Enough

Question ID : 26433054177
Status : Answered
Chosen Option : 3

Q.22 The ICC under-19 World Cup Cricket – 2022 tournament was held in _____.

- Ans
- 1. Australia
 - 2. England
 - 3. New Zealand
 - 4. West Indies

Question ID : 26433054673
Status : Answered
Chosen Option : 2

Q.23 In 2019, which mission-mode water conservation campaign was launched for water-stressed districts regarding awareness and improvement of water conservation interventions?

- Ans
- 1. Jal Shakti Abhiyan
 - 2. Swajal Scheme
 - 3. National Rural Drinking Water Programme
 - 4. Jal Jeevan Mission

Question ID : 26433067143
Status : Answered
Chosen Option : 2

Q.24 Myopia is also known as:

- Ans
- 1. long-sightedness
 - 2. distance-sightedness
 - 3. near-sightedness
 - 4. plane-sightedness

Question ID : 26433054006
Status : Answered
Chosen Option : 1

Q.25 The agreement signed between Congress and Muslim League that paved the way for joint political campaign for both the Hindus and the Muslims is known as:

- Ans
- 1. Cabinet Mission Plan
 - 2. Poona Pact
 - 3. Lucknow Pact
 - 4. Wavell Plan

Question ID : 26433054289
Status : Answered
Chosen Option : 2