

## Sub Inspector in Delhi Police and Central Armed Police Forces Examination 2024 Paper I Exam

Roll Number	
Candidate Name	
Venue Name	Pawan Ganga Educational Center 2
Exam Date	28/06/2024
Exam Time	9:00 AM - 11:00 AM
Subject	SICPO Paper I 2024

### Section : General Intelligence and Reasoning

Q.1 Two statements are given followed by two conclusions numbered I and II. Assuming the statements to be true, even if they seem to be at variance with commonly known facts, decide which of the conclusions logically follow(s) from the statements.

Statements:

- 1) All games are tournaments.
- 2) Some tournaments are matches.

Conclusions:

- I. All games are matches.
- II. No game is a tournament.

- Ans
- 1. Only Conclusion I follows.
  - 2. Neither Conclusion I nor II follows.
  - 3. Both Conclusions I and II follow.
  - 4. Only Conclusion II follows.

Question ID : 630680416931  
 Option 1 ID : 6306801626487  
 Option 2 ID : 6306801626489  
 Option 3 ID : 6306801626490  
 Option 4 ID : 6306801626488

Status : Answered  
 Chosen Option : 2

Q.2 Select the correct mirror image of the given figure when the mirror is placed at MN.



- Ans
- 1. R b 2 2 j d
  - 2. R b 5 2 j d
  - 3. R p 5 2 j d
  - 4. R b 5 5 j d

Question ID : 630680325842  
 Option 1 ID : 6306801267561  
 Option 2 ID : 6306801267563  
 Option 3 ID : 6306801267562  
 Option 4 ID : 6306801267564

Status : Answered  
 Chosen Option : 2

Q.3 If + means -, - means ×, × means ÷, ÷ means +, then what will be the value of the following expression?  
 $145 \div 96 \times 12 + 13 = ?$

- Ans
- 1. 170
  - 2. 120
  - 3. 140
  - 4. 185

Question ID : 630680411775  
Option 1 ID : 6306801605935  
Option 2 ID : 6306801605936  
Option 3 ID : 6306801605938  
Option 4 ID : 6306801605937  
Status : Answered  
Chosen Option : 3

Q.4 In a code language, 'GAME' is written as 'KCQG', and 'FARM' is written as 'JCVO'. How will 'TOWN' be written in that language?

- Ans
- 1. XQAP
  - 2. PAXQ
  - 3. XAPQ
  - 4. AXQP

Question ID : 630680416690  
Option 1 ID : 6306801625523  
Option 2 ID : 6306801625526  
Option 3 ID : 6306801625524  
Option 4 ID : 6306801625525  
Status : Answered  
Chosen Option : 1

Q.5 Select the option that is related to the third term in the same way as the second term is related to the first term and the sixth term is related to the fifth term.  
 $29 : 61 :: 47 : ? :: 15 : 33$

- Ans
- 1. 108
  - 2. 89
  - 3. 76
  - 4. 97

Question ID : 630680107256  
Option 1 ID : 630680416411  
Option 2 ID : 630680416409  
Option 3 ID : 630680416408  
Option 4 ID : 630680416410  
Status : Answered  
Chosen Option : 4

Q.6 Select the option that is related to the fifth letter-cluster in the same way as the second letter-cluster is related to the first letter-cluster and the fourth letter-cluster is related to the third letter-cluster.

MAILED : DELMAI :: FABRIC : CIRFAB :: JACKET : ?

- Ans
- 1. JKTACE
  - 2. JEKCAT
  - 3. TEKCAJ
  - 4. TEKJAC

Question ID : 630680416504

Option 1 ID : 6306801624782

Option 2 ID : 6306801624780

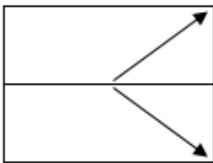
Option 3 ID : 6306801624781

Option 4 ID : 6306801624779

Status : Marked For Review

Chosen Option : 4

Q.7 A transparent sheet with a pattern is given below. Select the option that depicts the pattern that would appear when the given transparent sheet is folded at the middle horizontal line.



Ans

- 1.
- 2.
- 3.
- 4.

Question ID : 630680389401

Option 1 ID : 6306801518063

Option 2 ID : 6306801518062

Option 3 ID : 6306801518065

Option 4 ID : 6306801518064

Status : Answered

Chosen Option : 2

**Q.8** Two Statements are given followed by Three conclusions numbered I, II and III. Assuming the statements to be true, even if they seem to be at variance with commonly known facts, decide which of the conclusions logically follow(s) from the statements.

Statements:

All blues are reds.

All greens are blues.

Conclusions:

I. No red is a blue.

II. No blue is a green.

III. No green is a red.

- Ans
- 1. Both conclusions I and III follow.
  - 2. None of the conclusions follow.
  - 3. Both conclusions I and II follow.
  - 4. Both conclusions II and III follow.

Question ID : 630680417243

Option 1 ID : 6306801627736

Option 2 ID : 6306801627738

Option 3 ID : 6306801627735

Option 4 ID : 6306801627737

Status : Marked For Review

Chosen Option : 2

**Q.9** Select the number from among the given options that can replace the question mark (?) in the following series.  
38, 40, 42, 42, 46, 44, ?

- Ans
- 1. 52
  - 2. 50
  - 3. 48
  - 4. 54

Question ID : 630680411926

Option 1 ID : 6306801606540

Option 2 ID : 6306801606541

Option 3 ID : 6306801606539

Option 4 ID : 6306801606542

Status : Answered

Chosen Option : 2

**Q.10** Which of the following numbers will replace the question mark (?) in the given series?  
55, 62, ?, 72, 75, 82

- Ans
- 1. 65
  - 2. 69
  - 3. 71
  - 4. 68

Question ID : 630680411951

Option 1 ID : 6306801606641

Option 2 ID : 6306801606642

Option 3 ID : 6306801606640

Option 4 ID : 6306801606639

Status : Answered

Chosen Option : 1

**Q.11** In the given number-pairs, the second number is obtained by applying certain mathematical operations to the first number. Select the number-pair in which the numbers are related in the same way as are the numbers of the given number-pairs. (NOTE: Operations should be performed on the whole numbers, without breaking down the numbers into its constituent digits. E.g., 13 – Operations on 13 such as adding/subtracting/multiplying etc. to 13 can be performed. Breaking down 13 into 1 and 3 and then performing mathematical operations on 1 and 3 is not allowed.)  
(19, 200)  
(15, 160)

- Ans  1. (23, 300)  
 2. (22, 230)  
 3. (25, 250)  
 4. (18, 200)

Question ID : 630680337274  
Option 1 ID : 6306801311820  
Option 2 ID : 6306801311817  
Option 3 ID : 6306801311818  
Option 4 ID : 6306801311819  
Status : Answered  
Chosen Option : 2

**Q.12** In a certain code language, 'FLY' is written as '38' and 'NUT' is written as '26'. How will 'GOD' be written in that language?

- Ans  1. 55  
 2. 34  
 3. 28  
 4. 46

Question ID : 630680416588  
Option 1 ID : 6306801625117  
Option 2 ID : 6306801625115  
Option 3 ID : 6306801625116  
Option 4 ID : 6306801625118  
Status : Not Attempted and Marked For Review  
Chosen Option : --

**Q.13** In a code language, 'PEN' is coded as '70' and 'NEST' is coded as '116'. How will 'PEON' be coded in the same language?

- Ans  1. 162  
 2. 46  
 3. 100  
 4. 99

Question ID : 630680302860  
Option 1 ID : 6306801178102  
Option 2 ID : 6306801178104  
Option 3 ID : 6306801178105  
Option 4 ID : 6306801178103  
Status : Answered  
Chosen Option : 3

Q.14 If 'P' stands for '+', 'Q' stands for 'x', 'R' stands for '+' and 'S' stands for '-', what will come in place of the question mark (?) in the following equation?

$$174 P 2 S 45 R (16 P 4) Q 5 S 26 = ?$$

- Ans
- 1. 32
  - 2. 48
  - 3. 36
  - 4. 44

Question ID : 630680411671  
Option 1 ID : 6306801605520  
Option 2 ID : 6306801605519  
Option 3 ID : 6306801605522  
Option 4 ID : 6306801605521  
Status : Answered  
Chosen Option : 3

Q.15 Find the two signs to be interchanged for making the following equation correct.  
 $9 + 6 \times 3 - 9 \div 1 = 10$

- Ans
- 1.  $\times$  and  $\div$
  - 2.  $\div$  and  $-$
  - 3.  $-$  and  $+$
  - 4.  $\div$  and  $+$

Question ID : 630680411794  
Option 1 ID : 6306801606012  
Option 2 ID : 6306801606013  
Option 3 ID : 6306801606014  
Option 4 ID : 6306801606011  
Status : Answered  
Chosen Option : 2

Q.16 Based on the English alphabetical order, three of the following four letter-clusters are alike in a certain way and thus form a group. Which letter-cluster does not belong to that group?  
(Note: The odd letter-cluster is not based on the number of consonants/vowels or their position in the letter-cluster.)

- Ans
- 1. OVS
  - 2. LSP
  - 3. JQM
  - 4. NUR

Question ID : 630680416094  
Option 1 ID : 6306801623139  
Option 2 ID : 6306801623141  
Option 3 ID : 6306801623142  
Option 4 ID : 6306801623140  
Status : Answered  
Chosen Option : 3

Q.17 Six friends - A,B, C, D, E and F - are sitting around a circular table, facing towards the centre of the table.

D and C are immediate neighbours of A. B is second to the right of A. F is an immediate neighbour of E , and fourth to the left of D. What is the position of E?

- Ans
- 1. Third to the left of A
  - 2. Immediate left of C
  - 3. Second to the right of A
  - 4. Immediate neighbour of D and F

Question ID : 630680417261

Option 1 ID : 6306801627809

Option 2 ID : 6306801627810

Option 3 ID : 6306801627807

Option 4 ID : 6306801627808

Status : Answered

Chosen Option : 2

Q.18 Select the set in which the numbers are related in the same way as are the numbers of the following sets.

(NOTE: Operations should be performed on the whole numbers, without breaking down the numbers into its constituent digits. E.g. 13 – Operations on 13 such as adding /deleting /multiplying etc. to 13 can be performed. Breaking down 13 into 1 and 3 and then performing mathematical operations on 1 and 3 is not allowed)

(21, 105, 35)

(27, 135, 45)

- Ans
- 1. (39, 195, 65)
  - 2. (39, 195, 55)
  - 3. (39, 185, 65)
  - 4. (37, 195, 65)

Question ID : 630680344672

Option 1 ID : 6306801340997

Option 2 ID : 6306801341000

Option 3 ID : 6306801340999

Option 4 ID : 6306801340998

Status : Not Attempted and Marked For Review

Chosen Option : --

Q.19 If 'A' stands for '+', 'B' stands for '×', 'C' stands for '+' and 'D' stands for '-', what will come in place of the question mark (?) in the following equation?  
 $455 A 5 D 17 C 36 B 4 = ?$

- Ans
- 1. 214
  - 2. 216
  - 3. 220
  - 4. 218

Question ID : 630680411711

Option 1 ID : 6306801605679

Option 2 ID : 6306801605680

Option 3 ID : 6306801605682

Option 4 ID : 6306801605681

Status : Answered

Chosen Option : 4

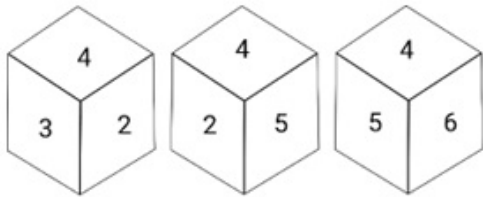
Q.20 If 'A' stands for '+', 'B' stands for '-', 'C' stands for '×' and 'D' stands for '÷', what will come in place of the question mark (?) in the following equation?

29 A 37 B 14 C 3 A (84 D 4) A 46 = ?

- Ans  1. 78  
 2. 91  
 3. 83  
 4. 97

Question ID : 630680411675  
Option 1 ID : 6306801605535  
Option 2 ID : 6306801605538  
Option 3 ID : 6306801605536  
Option 4 ID : 6306801605537  
Status : Answered  
Chosen Option : 2

Q.21 Three different positions of the same dice are given. Find the number on the face opposite to the face showing '6'.



- Ans  1. 3  
 2. 4  
 3. 2  
 4. 1

Question ID : 630680367565  
Option 1 ID : 6306801431709  
Option 2 ID : 6306801431712  
Option 3 ID : 6306801431711  
Option 4 ID : 6306801431710  
Status : Answered  
Chosen Option : 3

Q.22 Vani starts from point A and drives 6 km towards West. She then takes a left turn, drives 8 km. She then turns left and drives 6 km to reach point B. In which direction is point B with respect to point A?

- Ans  1. North  
 2. South  
 3. South-west  
 4. South-east

Question ID : 630680416344  
Option 1 ID : 6306801624139  
Option 2 ID : 6306801624140  
Option 3 ID : 6306801624142  
Option 4 ID : 6306801624141  
Status : Answered  
Chosen Option : 2



Q.23 3 is related to 2 following a certain logic. Following the same logic, 9 is related to 6.  
Which of the following numbers is related to 12 using the same logic?

- Ans
- 1. 16
  - 2. 18
  - 3. 20
  - 4. 14

Question ID : 63068063338  
Option 1 ID : 630680244519  
Option 2 ID : 630680244520  
Option 3 ID : 630680244521  
Option 4 ID : 630680244518  
Status : Answered  
Chosen Option : 2

Q.24 Identify the figure given in the options which when put in place of '?' will logically complete the series.



Ans

- 1.
- 2.
- 3.
- 4.

Question ID : 630680366162  
Option 1 ID : 6306801426173  
Option 2 ID : 6306801426174  
Option 3 ID : 6306801426176  
Option 4 ID : 6306801426175  
Status : Answered  
Chosen Option : 4

**Q.25** Which of the following terms will replace the question mark (?) in the given series?  
HMW, INX, JOY, ?

- Ans  1. KPZ  
 2. EHM  
 3. DHM  
 4. DJB

Question ID : 630680417062  
Option 1 ID : 6306801627013  
Option 2 ID : 6306801627014  
Option 3 ID : 6306801627011  
Option 4 ID : 6306801627012  
Status : Answered  
Chosen Option : 1

**Q.26** In a certain code language, 'JAM' is written as '24' and 'GEL' is written as '24'. How will 'LAW' be written in that language?

- Ans  1. 32  
 2. 24  
 3. 36  
 4. 28

Question ID : 630680416591  
Option 1 ID : 6306801625130  
Option 2 ID : 6306801625129  
Option 3 ID : 6306801625128  
Option 4 ID : 6306801625127  
Status : Answered  
Chosen Option : 3

**Q.27** Select the set in which the numbers are related in the same way as are the numbers of the given sets.

(NOTE: Operations should be performed on the whole numbers, without breaking down the numbers into its constituent digits. E.g. 13 – Operations on 13 such as adding/deleting/multiplying, etc. to 13 can be performed. Breaking down 13 into 1 and 3 and then performing mathematical operations on 1 and 3 is not allowed.)

(4, 12, 48)  
(9, 27, 108)

- Ans  1. (13, 39, 146)  
 2. (13, 36, 146)  
 3. (13, 39, 156)  
 4. (13, 36, 156)

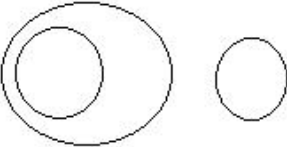
Question ID : 630680294008  
Option 1 ID : 6306801143846  
Option 2 ID : 6306801143847  
Option 3 ID : 6306801143845  
Option 4 ID : 6306801143844  
Status : Answered  
Chosen Option : 3

Q.28 Select the Venn diagram that best illustrates the relationship between the following classes.

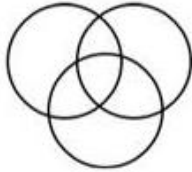
Mother, Women, Husband

Ans

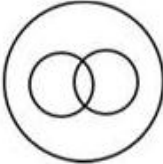
✓ 1.



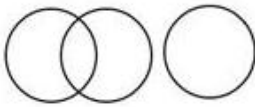
✗ 2.



✗ 3.



✗ 4.



Question ID : 630680417385

Option 1 ID : 6306801628303

Option 2 ID : 6306801628306

Option 3 ID : 6306801628304

Option 4 ID : 6306801628305

Status : Answered

Chosen Option : 1

Q.29 Two statements are given, followed by two conclusions numbered I and II. Assuming the statements to be true, even if they seem to be at variance with commonly known facts, decide which of the conclusions logically follow(s) from the statements.

Statements:

All roads are routes.

All routes are bridges.

Conclusions:

I. Some routes are roads.

II. All roads are bridges.

Ans

✗ 1. Only conclusion II follows

✗ 2. Only conclusion I follows

✓ 3. Both conclusions I and II follow

✗ 4. Neither conclusion I nor II follows

Question ID : 630680417006

Option 1 ID : 6306801626788

Option 2 ID : 6306801626787

Option 3 ID : 6306801626789

Option 4 ID : 6306801626790

Status : Answered

Chosen Option : 2

Q.30 In a certain code language, 'CITY' is written as '241872', and 'DRUG' is written as '239620'. How will 'GOLF' be written in that language?

- Ans
- 1. 7121521
  - 2. 20121521
  - 3. 7151212
  - 4. 18151215

Question ID : 630680416610  
Option 1 ID : 6306801625205  
Option 2 ID : 6306801625206  
Option 3 ID : 6306801625204  
Option 4 ID : 6306801625203  
Status : Answered  
Chosen Option : 2

Q.31 In a certain code language,  
'A x B' means 'A is the son of B',  
'A - B' means 'A is the brother of B',  
'A + B' means 'A is the wife of B',  
'A % B' means 'A is the father of B'.  
How is M related to T if 'M x N + P % S - T'?

- Ans
- 1. Mother's brother
  - 2. Brother
  - 3. Husband
  - 4. Father

Question ID : 630680869744  
Option 1 ID : 6306803406345  
Option 2 ID : 6306803406344  
Option 3 ID : 6306803406343  
Option 4 ID : 6306803406342  
Status : Answered  
Chosen Option : 2

Q.32 Which letter cluster will replace the question mark (?) to complete the given series?  
WTNM, SYHT, ?, KIVH, GNPO

- Ans
- 1. OFHA
  - 2. ODBA
  - 3. UIDS
  - 4. HREK

Question ID : 630680417193  
Option 1 ID : 6306801627537  
Option 2 ID : 6306801627538  
Option 3 ID : 6306801627535  
Option 4 ID : 6306801627536  
Status : Answered  
Chosen Option : 2

Q.33 Select the figure from among the given options that can logically replace the question mark (?) in the following series.

@       !! &    μ	&    !! @ μ	μ    @ &       !!	& μ !!    @	?
-------------------------	-------------------	-------------------------	-------------------	---

Ans

✓ 1.

!!    μ    @    &
-------------------------

✗ 2.

μ    !! @       &
-------------------------

✗ 3.

&    μ !! @
-------------------

✗ 4.

!! @ &    μ
-------------------

Question ID : 630680867754

Option 1 ID : 6306803398661

Option 2 ID : 6306803398662

Option 3 ID : 6306803398660

Option 4 ID : 6306803398663

Status : Answered

Chosen Option : 1

Q.34 Which of the following numbers will replace the question mark (?) in the given series?  
9, 20, 42, 86, 174, ?

- Ans  1. 350  
 2. 370  
 3. 360  
 4. 380

Question ID : 630680411774  
Option 1 ID : 6306801605931  
Option 2 ID : 6306801605933  
Option 3 ID : 6306801605932  
Option 4 ID : 6306801605934  
Status : Answered  
Chosen Option : 1

Q.35 If + means  $\times$ ,  $\times$  means  $\div$ ,  $\div$  means  $+$ , what will come in place of the question mark (?) in the given equation?

$$180 \times 60 - 30 \div 30 + 20 = ?$$

- Ans  1. 199  
 2. 200  
 3. 100  
 4. 160

Question ID : 630680154559  
Option 1 ID : 630680598042  
Option 2 ID : 630680598043  
Option 3 ID : 630680598040  
Option 4 ID : 630680598041  
Status : Answered  
Chosen Option : 3

Q.36 In a certain code language, 'stay for dinner' is written as 'px rn tf' and 'dinner is ready' is written as 'sq mv rn'. How is 'dinner' written in the given language?

- Ans  1. px  
 2. rn  
 3. tf  
 4. sq

Question ID : 630680305477  
Option 1 ID : 6306801188286  
Option 2 ID : 6306801188287  
Option 3 ID : 6306801188288  
Option 4 ID : 6306801188285  
Status : Answered  
Chosen Option : 2

Q.37 Which of the following interchanges of signs would make the given equation correct?  
 $10 + 23 - 3 \times 63 \div 7 = 70$

- Ans  1. + and ×  
 2. - and ×  
 3. + and ×  
 4. - and +

Question ID : 630680411962  
Option 1 ID : 6306801606686  
Option 2 ID : 6306801606685  
Option 3 ID : 6306801606683  
Option 4 ID : 6306801606684  
Status : Answered  
Chosen Option : 2

Q.38 Sunil drives 5 km from point A towards the west. He then takes a left turn and drives 6 km. He again takes a left turn and drives 11 km. He then takes a left turn and drives 6 km. He finally takes a right turn and drives 6 km to arrive at point B. How much and in which direction does he have to drive to return to point A?  
(All the turns are 90° turns only.)

- Ans  1. 12 km towards the west  
 2. 10 km towards the east  
 3. 10 km towards the west  
 4. 14 km towards the east

Question ID : 630680163321  
Option 1 ID : 630680632470  
Option 2 ID : 630680632468  
Option 3 ID : 630680632469  
Option 4 ID : 630680632471  
Status : Marked For Review  
Chosen Option : 1

Q.39 Select the option that indicates the correct arrangement of the given words in the order in which they appear in an English dictionary.

- 1- Kibble
- 2- Kennel
- 3- Kettle
- 4- Kicker
- 5- Kernel

- Ans  1. 5, 2, 3, 1, 4  
 2. 2, 5, 3, 1, 4  
 3. 5, 3, 2, 1, 4  
 4. 2, 3, 5, 4, 1

Question ID : 630680417217  
Option 1 ID : 6306801627633  
Option 2 ID : 6306801627634  
Option 3 ID : 6306801627631  
Option 4 ID : 6306801627632  
Status : Answered  
Chosen Option : 4

**Q.40** Select the option that is related to the third word in the same way as the second word is related to the first word.

(The words must be considered as meaningful English words and must not be related to each other based on the number of letters/number of consonants/ vowels in the word.)

Episode : Series :: Chapter : ?

Ans  1. Author

2. Book

3. Drama

4. Page

Question ID : 630680416415

Option 1 ID : 6306801624423

Option 2 ID : 6306801624424

Option 3 ID : 6306801624425

Option 4 ID : 6306801624426

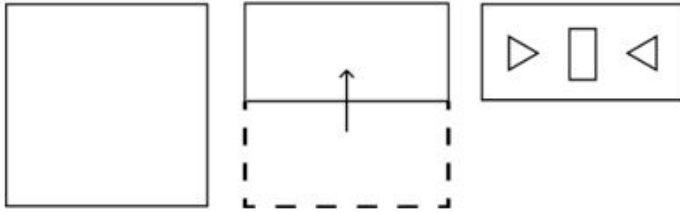
Status : Answered

Chosen Option : 2


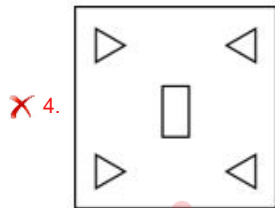
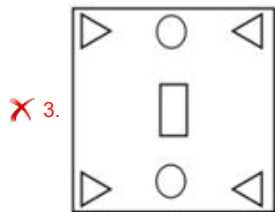
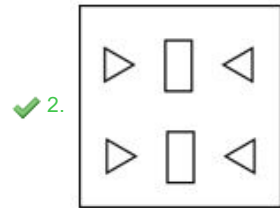
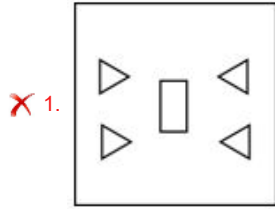




**Q.41** A sheet of paper is folded along the dotted line successively along the directions shown and is then punched in the last. How would the paper look when unfolded?



Ans



Question ID : 630680332542

Option 1 ID : 6306801293608

Option 2 ID : 6306801293607

Option 3 ID : 6306801293606

Option 4 ID : 6306801293605

Status : Answered

Chosen Option : 2

**Q.42** Select the option that represents the correct order of the given words as they would appear in an English dictionary.

1. Infant
2. Indolent
3. Inert
4. Infamous
5. Inefficient
6. Ineffable

**Ans** ✓ 1. 2, 6, 5, 3, 4, 1

✗ 2. 5, 4, 3, 2, 1, 6

✗ 3. 5, 3, 4, 6, 2, 1

✗ 4. 2, 5, 6, 1, 4, 3

Question ID : **630680417394**

Option 1 ID : **6306801628339**

Option 2 ID : **6306801628341**

Option 3 ID : **6306801628342**

Option 4 ID : **6306801628340**

Status : **Answered**

Chosen Option : **1**



Q.43 Identify the figure given in the options, which when put in place of the question mark (?) will logically complete the series.

\$	9	%	\$	0	%	6	0	
	%		0		6		9	?
0	6	6	9	9	\$	\$	%	

Ans

✓ 1.

9	6
\$	
%	0

✗ 2.

\$	9
%	
0	6

✗ 3.

9	6
\$	
0	%

✗ 4.

9	6
%	
\$	0

Adda247

Question ID : 630680867769  
 Option 1 ID : 6306803398723  
 Option 2 ID : 6306803398722  
 Option 3 ID : 6306803398720  
 Option 4 ID : 6306803398721

Status : Answered

Chosen Option : 1

Q.44 Select the correct mirror image of the given figure when the mirror is placed at MN as shown below.



- Ans
- 1.  $\Delta$  C e r p s T
  - 2.  $\Delta$  D e q r T
  - 3.  $\Delta$  r b e D 7
  - 4.  $\Delta$  q r e D 7

Question ID : 630680356640

Option 1 ID : 6306801388561

Option 2 ID : 6306801388564

Option 3 ID : 6306801388563

Option 4 ID : 6306801388562

Status : Answered

Chosen Option : 3

Q.45 Which of the following numbers will replace the question mark (?) in the given series?

5      8      13      ?      29      40

- Ans
- 1. 30
  - 2. 25
  - 3. 18
  - 4. 20

Question ID : 630680412013

Option 1 ID : 6306801606888

Option 2 ID : 6306801606887

Option 3 ID : 6306801606890

Option 4 ID : 6306801606889

Status : Answered

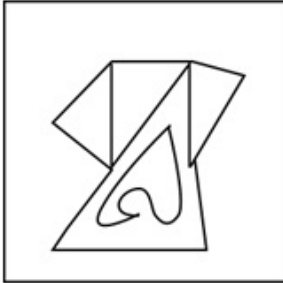
Chosen Option : 4

Q.46 Select the option figure in which the given figure is embedded as its part.  
(Rotation is not allowed.)



Ans

✓ 1.



✗ 2.



✗ 3.



✗ 4.



Question ID : 630680367563

Option 1 ID : 6306801431702

Option 2 ID : 6306801431701

Option 3 ID : 6306801431704

Option 4 ID : 6306801431703

Status : Answered

Chosen Option : 1

Q.47 Which letter-cluster will complete the given series?  
DHMX, GJKU, \_\_\_\_\_, MNGO

- Ans
- 1. IMIR
  - 2. JLIS
  - 3. JLIR
  - 4. IMIS

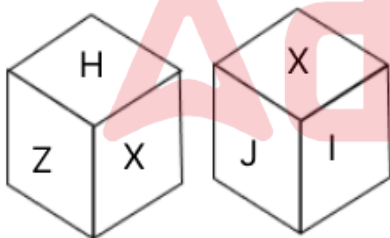
Question ID : 630680416699  
Option 1 ID : 6306801625561  
Option 2 ID : 6306801625560  
Option 3 ID : 6306801625559  
Option 4 ID : 6306801625562  
Status : Answered  
Chosen Option : 3

Q.48 In a certain code language,  
A + B means 'A is the mother of B'  
A - B means 'A is the brother of B'  
A × B means 'A is the wife of B'  
A ÷ B means 'A is the father of B'  
Based on the above, how is A related to E if 'A ÷ B - C + D - E × F'?

- Ans
- 1. Brother
  - 2. Father's father
  - 3. Father
  - 4. Mother's father

Question ID : 630680284954  
Option 1 ID : 6306801107815  
Option 2 ID : 6306801107816  
Option 3 ID : 6306801107818  
Option 4 ID : 6306801107817  
Status : Answered  
Chosen Option : 2

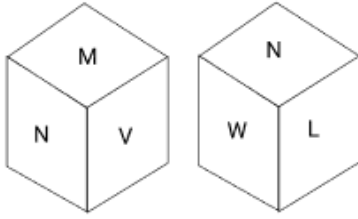
Q.49 A dice has its faces named by alphabets H, I, J, X, Y and Z. Two positions of the same dice are given below. Which face is opposite to face Y?



- Ans
- 1. X
  - 2. J
  - 3. H
  - 4. Z

Question ID : 630680867782  
Option 1 ID : 6306803398772  
Option 2 ID : 6306803398775  
Option 3 ID : 6306803398774  
Option 4 ID : 6306803398773  
Status : Answered  
Chosen Option : 1

**Q.50** A dice has its faces named by letters L, M, N, V, W and X. Two positions of the same dice are given below. Which face is opposite to face X?



- Ans  1. N  
 2. L  
 3. M  
 4. W

Question ID : 630680867792  
Option 1 ID : 6306803398814  
Option 2 ID : 6306803398813  
Option 3 ID : 6306803398812  
Option 4 ID : 6306803398815  
Status : Answered  
Chosen Option : 1

Section : General Knowledge and General Awareness

**Q.1** Kalidas Samman 2022 for Classical Music was given to:

- Ans  1. KG Subramanyan  
 2. Pandit Venkatesh Kumar  
 3. Mallikarjun Mansur  
 4. Semmangudi Srinivasa Iyer

Question ID : 630680411451  
Option 1 ID : 6306801604640  
Option 2 ID : 6306801604641  
Option 3 ID : 6306801604643  
Option 4 ID : 6306801604642  
Status : Answered  
Chosen Option : 4

**Q.2** The book *A suitable Boy* was authored by \_\_\_\_\_ in 1993.

- Ans  1. Vikram Seth  
 2. Arundhati Roy  
 3. Kiran Desai  
 4. David Davidar

Question ID : 630680701391  
Option 1 ID : 6306802747503  
Option 2 ID : 6306802747502  
Option 3 ID : 6306802747501  
Option 4 ID : 6306802747504  
Status : Answered  
Chosen Option : 1

Q.3 The signs of charges of electron, proton and neutron are \_\_\_\_\_, respectively.

- Ans  1. negative, positive and neutral,  
 2. positive, negative and neutral,  
 3. neutral, positive and negative,  
 4. negative, neutral and positive,

Question ID : 630680357729  
Option 1 ID : 6306801392908  
Option 2 ID : 6306801392905  
Option 3 ID : 6306801392907  
Option 4 ID : 6306801392906  
Status : Answered  
Chosen Option : 1

Q.4 Kojagiri Poornima is a festival celebrated primarily in \_\_\_\_\_ on the full moon day of Ashwin month.

- Ans  1. Bihar  
 2. Maharashtra  
 3. Andhra Pradesh  
 4. Kerala

Question ID : 630680410359  
Option 1 ID : 6306801600168  
Option 2 ID : 6306801600170  
Option 3 ID : 6306801600169  
Option 4 ID : 6306801600167  
Status : Not Answered  
Chosen Option : --

Q.5 Which of the following States/Union Territories of India receives the highest average annual rainfall?

- Ans  1. Delhi  
 2. Meghalaya  
 3. Ladakh  
 4. Rajasthan

Question ID : 630680409669  
Option 1 ID : 6306801597508  
Option 2 ID : 6306801597506  
Option 3 ID : 6306801597507  
Option 4 ID : 6306801597505  
Status : Answered  
Chosen Option : 2



Q.6 In case the President is satisfied with the Governor's report, he may declare President's Rule under Article 356 but such proclamation is initially for a period of \_\_\_\_\_.

- Ans
- 1. three months
  - 2. six months
  - 3. one month
  - 4. two months

Question ID : 630680408320  
Option 1 ID : 6306801592177  
Option 2 ID : 6306801592178  
Option 3 ID : 6306801592175  
Option 4 ID : 6306801592176  
Status : Answered  
Chosen Option : 2

Q.7 In which year did women take part in Modern Olympics for the first time?

- Ans
- 1. 1900
  - 2. 1916
  - 3. 1896
  - 4. 1904

Question ID : 630680162960  
Option 1 ID : 630680631068  
Option 2 ID : 630680631070  
Option 3 ID : 630680631069  
Option 4 ID : 630680631071  
Status : Marked For Review  
Chosen Option : 4

Q.8 In which of the following schedules of the Wildlife (Protection) Act, 1972 is the most common wild cat in India 'Felis chaus' listed?

- Ans
- 1. Schedule IV
  - 2. Schedule II
  - 3. Schedule I
  - 4. Schedule III

Question ID : 630680407524  
Option 1 ID : 6306801589037  
Option 2 ID : 6306801589034  
Option 3 ID : 6306801589035  
Option 4 ID : 6306801589036  
Status : Not Answered  
Chosen Option : --

Q.9 When was the 'The Objective Resolution' moved by Pt. Jawahar Lal Nehru?

- Ans
- 1. 15 August 1947
  - 2. 13 December 1946
  - 3. 16 November 1948
  - 4. 17 November 1946

Question ID : 630680408206  
Option 1 ID : 6306801591721  
Option 2 ID : 6306801591719  
Option 3 ID : 6306801591722  
Option 4 ID : 6306801591720  
Status : Marked For Review  
Chosen Option : 2

Q.10 Who among the following was primarily an exponent of Bharatanatyam dance?

- Ans
- 1. Kelucharan Mohapatra
  - 2. Rukmini Devi Arundale
  - 3. Pandit Birju Maharaj
  - 4. Guru Bipin Singh

Question ID : 630680409354  
Option 1 ID : 6306801596247  
Option 2 ID : 6306801596245  
Option 3 ID : 6306801596246  
Option 4 ID : 6306801596248  
Status : Answered  
Chosen Option : 2

Q.11 Eutrophication can be defined as:

- Ans
- 1. the gradual increase in the concentration of phosphorus, nitrogen, and other plant nutrients in a grassland ecosystem
  - 2. the gradual decrease in the concentration of phosphorus, nitrogen, and other plant nutrients in an aging aquatic ecosystem such as a lake
  - 3. the gradual increase in the concentration of phosphorus, nitrogen, and other plant nutrients in desert areas
  - 4. the gradual increase in the concentration of phosphorus, nitrogen, and other plant nutrients in an aging aquatic ecosystem such as a lake

Question ID : 630680407540  
Option 1 ID : 6306801589100  
Option 2 ID : 6306801589098  
Option 3 ID : 6306801589101  
Option 4 ID : 6306801589099  
Status : Not Answered  
Chosen Option : --

Q.12 Which of the following is the IUPAC name of m-Dichlorobenzene?

- Ans
- 1. 3,4-Dichlorobenzene
  - 2. 1,2-Dichlorobenzene
  - 3. 1,3-Dichlorobenzene
  - 4. 2,3-Dichlorobenzene

Question ID : 63068052310  
Option 1 ID : 630680201345  
Option 2 ID : 630680201342  
Option 3 ID : 630680201343  
Option 4 ID : 630680201344  
Status : Answered  
Chosen Option : 3

Q.13 World Athletics Under-20 Championship–2021 was held from 18 to 22 August 2021 at

- Ans
- 1. South Africa
  - 2. Brazil
  - 3. Argentina
  - 4. Kenya

Question ID : 630680112170  
Option 1 ID : 630680434407  
Option 2 ID : 630680434408  
Option 3 ID : 630680434409  
Option 4 ID : 630680434406  
Status : Not Answered  
Chosen Option : --

Q.14 Who among the following wrote Gulamgiri?

- Ans
- 1. Bal Gangadhar Tilak
  - 2. Mahatma Gandhi
  - 3. BR Ambedkar
  - 4. Jyotiba Phule

Question ID : 630680339404  
Option 1 ID : 6306801320188  
Option 2 ID : 6306801320187  
Option 3 ID : 6306801320185  
Option 4 ID : 6306801320186  
Status : Answered  
Chosen Option : 4

Q.15 Which of the following pairs of physicists and their contributions/discoveries is INCORRECT?

- Ans
- 1. Heinrich Rudolf Hertz – Generation of electromagnetic waves
  - 2. Albert Einstein – Explanation of photoelectric effect
  - 3. Michael Faraday – Laws of electromagnetic induction
  - 4. Galileo Galilei – Wave theory of light

Question ID : 63068061708  
Option 1 ID : 630680238153  
Option 2 ID : 630680238152  
Option 3 ID : 630680238150  
Option 4 ID : 630680238151  
Status : Answered  
Chosen Option : 4

Q.16 Dantivarman or Dantidurga was the founder of which of the following dynasties?

- Ans
- 1. Chera
  - 2. Pala
  - 3. Pratihara
  - 4. Rashtrakuta

Question ID : 630680198445  
Option 1 ID : 630680769742  
Option 2 ID : 630680769741  
Option 3 ID : 630680769740  
Option 4 ID : 630680769739  
Status : Marked For Review  
Chosen Option : 4

Q.17 In which year was the Foreign Investment Board established?

- Ans
- 1. 1991
  - 2. 1968
  - 3. 1960
  - 4. 1965

Question ID : 630680407165  
Option 1 ID : 6306801587605  
Option 2 ID : 6306801587604  
Option 3 ID : 6306801587602  
Option 4 ID : 6306801587603  
Status : Marked For Review  
Chosen Option : 1

Q.18 The Salal Hydroelectric Power Station is located in which Union Territory of India?

- Ans
- 1. Ladakh
  - 2. Lakshadweep
  - 3. Chandigarh
  - 4. Jammu and Kashmir

Question ID : 630680409705  
Option 1 ID : 6306801597649  
Option 2 ID : 6306801597650  
Option 3 ID : 6306801597651  
Option 4 ID : 6306801597652  
Status : Marked For Review  
Chosen Option : 4

Q.19 Selling of bonds by the RBI will cause money supply to \_\_\_\_\_.

- Ans
- 1. decrease
  - 2. fluctuate
  - 3. increase
  - 4. No relationship exists between selling bonds and money supply

Question ID : 630680407144  
Option 1 ID : 6306801587519  
Option 2 ID : 6306801587520  
Option 3 ID : 6306801587518  
Option 4 ID : 6306801587521  
Status : Marked For Review  
Chosen Option : 1

Q.20 Which of the following banks is in charge of India's banking and monetary system?

- Ans
- 1. RBI
  - 2. Union Bank
  - 3. BOB
  - 4. SBI

Question ID : 630680407198  
Option 1 ID : 6306801587734  
Option 2 ID : 6306801587737  
Option 3 ID : 6306801587736  
Option 4 ID : 6306801587735  
Status : Answered  
Chosen Option : 1

**Q.21 Among the following, which is not a qualification for membership in the Vidhan Sabha**

- Ans
- 1. Not hold any office of profit
  - 2. Citizen of India
  - 3. Knowledge of Politics
  - 4. Have attained the age of 25 Years

Question ID : 630680408210  
Option 1 ID : 6306801591736  
Option 2 ID : 6306801591735  
Option 3 ID : 6306801591738  
Option 4 ID : 6306801591737  
Status : Answered  
Chosen Option : 1

**Q.22 Which Article of the Indian Constitution mentions about the right of the Advocate-General of a state to speak in the State Legislature?**

- Ans
- 1. Article 181
  - 2. Article 177
  - 3. Article 179
  - 4. Article 183

Question ID : 630680408217  
Option 1 ID : 6306801591765  
Option 2 ID : 6306801591763  
Option 3 ID : 6306801591764  
Option 4 ID : 6306801591766  
Status : Not Answered  
Chosen Option : --

**Q.23 What are bases that are soluble in water called?**

- Ans
- 1. Alkalies
  - 2. Alkanes
  - 3. Acids
  - 4. Alkenes

Question ID : 630680407493  
Option 1 ID : 6306801588913  
Option 2 ID : 6306801588912  
Option 3 ID : 6306801588910  
Option 4 ID : 6306801588911  
Status : Not Answered  
Chosen Option : --

**Q.24 Who amongst the following became the president of the second session of the Indian National Congress held in Calcutta in December 1886?**

- Ans
- 1. Dadabhai Nauroji
  - 2. Badruddin Tyabji
  - 3. P Ananda Charlu
  - 4. William Wedderburn

Question ID : 630680127646  
Option 1 ID : 630680494841  
Option 2 ID : 630680494840  
Option 3 ID : 630680494842  
Option 4 ID : 630680494843  
Status : Answered  
Chosen Option : 1

Q.25 In which year was Dattopant Thengadi National Board for Workers Education and Development established?

- Ans
- 1. 1978
  - 2. 1968
  - 3. 1958
  - 4. 1948

Question ID : 630680115724  
Option 1 ID : 630680448237  
Option 2 ID : 630680448236  
Option 3 ID : 630680448235  
Option 4 ID : 630680448234  
Status : Not Answered  
Chosen Option : --

Q.26 When did the second urbanisation in Ganga Valley take place?

- Ans
- 1. 3<sup>rd</sup> Century BCE
  - 2. 5<sup>th</sup> Century BCE
  - 3. 6<sup>th</sup> Century BCE
  - 4. 2<sup>nd</sup> Century BCE

Question ID : 630680412357  
Option 1 ID : 6306801608251  
Option 2 ID : 6306801608254  
Option 3 ID : 6306801608253  
Option 4 ID : 6306801608252  
Status : Answered  
Chosen Option : 1

Q.27 Which festival is celebrated after the month of Ramzan?

- Ans
- 1. Milad un Nabi
  - 2. Jammal UI Vida
  - 3. Eid ul Fitr
  - 4. Muharram

Question ID : 630680409205  
Option 1 ID : 6306801595651  
Option 2 ID : 6306801595650  
Option 3 ID : 6306801595649  
Option 4 ID : 6306801595652  
Status : Answered  
Chosen Option : 3

Q.28 Veteran Kathak Dancer Aditi Mangaldas bagged the \_\_\_\_\_ .

- Ans
- 1. Mahari Award 2022
  - 2. Padma Vibhushan Award 2022
  - 3. Bharat Ratna Award 2022
  - 4. Padma Bhushan Award 2022

Question ID : 630680409352  
Option 1 ID : 6306801596240  
Option 2 ID : 6306801596238  
Option 3 ID : 6306801596239  
Option 4 ID : 6306801596237  
Status : Not Answered  
Chosen Option : --

Q.29 In which year did Lord Dalhousie introduce the railway line in British India?

- Ans
- 1. 1849
  - 2. 1870
  - 3. 1853
  - 4. 1861

Question ID : 630680412400  
Option 1 ID : 6306801608423  
Option 2 ID : 6306801608426  
Option 3 ID : 6306801608424  
Option 4 ID : 6306801608425  
Status : Answered  
Chosen Option : 3

Q.30 Which river flows into the Wular lake in the north and then into Baramulla?

- Ans
- 1. Beas
  - 2. Sutlej
  - 3. Jhelum
  - 4. Ravi

Question ID : 630680407450  
Option 1 ID : 6306801588738  
Option 2 ID : 6306801588741  
Option 3 ID : 6306801588739  
Option 4 ID : 6306801588740  
Status : Answered  
Chosen Option : 3

Q.31 A long, winding ridge of stratified sand and gravel is known as:

- Ans
- 1. esker
  - 2. Moraine
  - 3. Erratic
  - 4. Aquifer

Question ID : 630680199628  
Option 1 ID : 630680774122  
Option 2 ID : 630680774119  
Option 3 ID : 630680774121  
Option 4 ID : 630680774120  
Status : Answered  
Chosen Option : 1

Q.32 Identify a substance that is NOT an allotrope of carbon.

- Ans
- 1. Graphite
  - 2. Buckminsterfullerene
  - 3. Diamond
  - 4. Phosphorus

Question ID : 63068099065  
Option 1 ID : 630680384964  
Option 2 ID : 630680384965  
Option 3 ID : 630680384966  
Option 4 ID : 630680384967  
Status : Answered  
Chosen Option : 4

**Q.33** The government of India recently changed the name of Rajiv Gandhi Khel Ratna Award to Dhyan Chand Khel Ratna Award, Dhyan Chand served in the Indian army as a:

- Ans
- 1. Major General
  - 2. Field Marshal
  - 3. General
  - 4. Major

Question ID : 63068056636  
Option 1 ID : 630680218479  
Option 2 ID : 630680218480  
Option 3 ID : 630680218481  
Option 4 ID : 630680218478  
Status : Answered  
Chosen Option : 4

**Q.34** Identify a mobile source of food.

- Ans
- 1. Grass
  - 2. Dead goat
  - 3. Deer
  - 4. Shrubs

Question ID : 630680407497  
Option 1 ID : 6306801588928  
Option 2 ID : 6306801588929  
Option 3 ID : 6306801588927  
Option 4 ID : 6306801588926  
Status : Answered  
Chosen Option : 3

**Q.35** Which Article of the Indian Constitution mentions that 'The State shall endeavour to organise agriculture and animal husbandry on modern and scientific lines'?

- Ans
- 1. Article 43
  - 2. Article 48
  - 3. Article 42
  - 4. Article 46

Question ID : 630680408247  
Option 1 ID : 6306801591883  
Option 2 ID : 6306801591886  
Option 3 ID : 6306801591884  
Option 4 ID : 6306801591885  
Status : Answered  
Chosen Option : 2

**Q.36** Who among the following is NOT an Odissi dancer?

- Ans
- 1. Kumkum Mohanty
  - 2. Sonal Mansingh
  - 3. Protima Bedi
  - 4. Anita Ratnam

Question ID : 630680216133  
Option 1 ID : 630680838507  
Option 2 ID : 630680838510  
Option 3 ID : 630680838508  
Option 4 ID : 630680838509  
Status : Answered  
Chosen Option : 2



Q.37 Which Assamese playback singer was conferred with the Bharat Ratna in 2019?

- Ans
- 1. Kishore Kumar
  - 2. Bhupen Hazarika
  - 3. Usha Mangeshkar
  - 4. Lucky Ali

Question ID : 630680415792  
Option 1 ID : 6306801621926  
Option 2 ID : 6306801621924  
Option 3 ID : 6306801621925  
Option 4 ID : 6306801621923  
Status : Answered  
Chosen Option : 2

Q.38 Which of the following is NOT a basic feature of the Indian Constitution?

- Ans
- 1. Blend of rigidity and flexibility
  - 2. Lengthiest written Constitution
  - 3. Parliamentary system
  - 4. Drawn from one source

Question ID : 630680408295  
Option 1 ID : 6306801592077  
Option 2 ID : 6306801592075  
Option 3 ID : 6306801592078  
Option 4 ID : 6306801592076  
Status : Answered  
Chosen Option : 4

Q.39 Siyaram Tewari belongs to which of the following music Gharanas?

- Ans
- 1. Bettiah
  - 2. Dagari
  - 3. Kirana
  - 4. Darbhanga

Question ID : 630680409334  
Option 1 ID : 6306801596168  
Option 2 ID : 6306801596166  
Option 3 ID : 6306801596165  
Option 4 ID : 6306801596167  
Status : Not Answered  
Chosen Option : --

Q.40 बास्केटबॉल में, जब एक रेफरी यह निर्धारित करने के लिए गेंद को सेंटर सर्कल में ऊपर फेंकता है कि किस टीम को गेंद प्राप्त होती है उसे \_\_\_\_\_ कहा जाता है।

- Ans
- 1. डंक बॉल
  - 2. जम्प बॉल
  - 3. हुक बॉल
  - 4. हाई बॉल

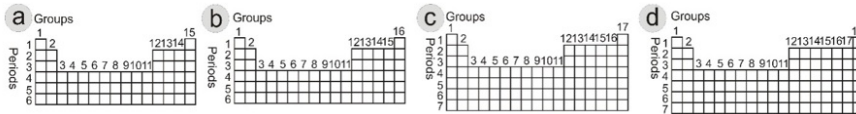
Question ID : 630680303675  
Option 1 ID : 6306801181271  
Option 2 ID : 6306801181269  
Option 3 ID : 6306801181272  
Option 4 ID : 6306801181270  
Status : Not Answered  
Chosen Option : --

Q.41 At higher levels of development, which sector of the economy contributes less to the GDP?

- Ans
- 1. Service sector
  - 2. Both service and agriculture sector
  - 3. Industrial sector
  - 4. Agriculture sector

Question ID : 630680407121  
Option 1 ID : 6306801587426  
Option 2 ID : 6306801587429  
Option 3 ID : 6306801587427  
Option 4 ID : 6306801587428  
Status : Answered  
Chosen Option : 4

Q.42 Which of the following depicts the Modern Periodic Table?



- Ans
- 1. a
  - 2. c
  - 3. b
  - 4. d

Question ID : 630680210476  
Option 1 ID : 630680816063  
Option 2 ID : 630680816065  
Option 3 ID : 630680816064  
Option 4 ID : 630680816066  
Status : Answered  
Chosen Option : 4

Q.43 Diwan-i Kohi was the department of \_\_\_\_\_ introduced by Muhammad Bin Tughlaq.

- Ans
- 1. military
  - 2. market
  - 3. charity
  - 4. agriculture

Question ID : 630680412507  
Option 1 ID : 6306801608852  
Option 2 ID : 6306801608854  
Option 3 ID : 6306801608853  
Option 4 ID : 6306801608851  
Status : Not Answered  
Chosen Option : --

Q.44 In which of the following districts is Baira Siul Dam located?

- Ans
- 1. Kinnaur
  - 2. Mandi
  - 3. Bilaspur
  - 4. Chamba

Question ID : 630680409698  
Option 1 ID : 6306801597624  
Option 2 ID : 6306801597621  
Option 3 ID : 6306801597622  
Option 4 ID : 6306801597623  
Status : Not Answered  
Chosen Option : --

Q.45 According to Census 2011, which of the following languages is spoken by the least population in India?

- Ans
- 1. Assamese
  - 2. Dogri
  - 3. Sanskrit
  - 4. Konkani

Question ID : 630680409701  
Option 1 ID : 6306801597633  
Option 2 ID : 6306801597636  
Option 3 ID : 6306801597635  
Option 4 ID : 6306801597634  
Status : Answered  
Chosen Option : 3

Q.46 'Unladylike' is a memoir by \_\_\_\_\_.

- Ans
- 1. Aishwarya Mohanraj
  - 2. Supriya Joshi
  - 3. Aditi Mittal
  - 4. Radhika Vaz

Question ID : 630680409383  
Option 1 ID : 6306801596364  
Option 2 ID : 6306801596363  
Option 3 ID : 6306801596362  
Option 4 ID : 6306801596361  
Status : Not Answered  
Chosen Option : --

Q.47 In which of the following ways were farmers encouraged to begin to use high yielding variety seeds?

- Ans
- 1. Agricultural labourers were paid wages directly by the government.
  - 2. Farmers' children were given free education in government colleges and universities.
  - 3. Farmers were given monetary support in cash to cultivate food grains.
  - 4. The government provided seeds and other inputs at prices lower than those prevailing in the market.

Question ID : 630680407186  
Option 1 ID : 6306801587689  
Option 2 ID : 6306801587688  
Option 3 ID : 6306801587687  
Option 4 ID : 6306801587686  
Status : Answered  
Chosen Option : 4

**Q.48** What is the name of the physical feature that is the longitudinal valley lying between the Lesser Himalayas and the Siwalik in India?

- Ans
- 1. Terai
  - 2. Doab
  - 3. Duns
  - 4. Bhabhar

Question ID : 630680701451  
Option 1 ID : 6306802747737  
Option 2 ID : 6306802747740  
Option 3 ID : 6306802747739  
Option 4 ID : 6306802747738  
Status : Answered  
Chosen Option : 3

**Q.49** Ram Sahay Panday, a 'Rai' dancer from Madhya Pradesh was conferred with which of the following awards in 2022?

- Ans
- 1. Arjuna Award
  - 2. Saraswati Samman
  - 3. Padma Shri
  - 4. Dronacharya Award

Question ID : 630680309157  
Option 1 ID : 6306801202807  
Option 2 ID : 6306801202806  
Option 3 ID : 6306801202805  
Option 4 ID : 6306801202808  
Status : Answered  
Chosen Option : 2

**Q.50** Which river originates from 'Rakshastal north-western tip' near Mansarovar?

- Ans
- 1. Sutlej River
  - 2. Ravi River
  - 3. Narmada River
  - 4. Tapti River

Question ID : 63068076889  
Option 1 ID : 630680297653  
Option 2 ID : 630680297654  
Option 3 ID : 630680297656  
Option 4 ID : 630680297655  
Status : Answered  
Chosen Option : 2

Q.1 Find the natural number obtained when the number 13 is subtracted from the mean proportional of 75 and 12.

- Ans
- 1. 14
  - 2. 27
  - 3. 17
  - 4. 30

Question ID : 630680428857  
Option 1 ID : 6306801673473  
Option 2 ID : 6306801673472  
Option 3 ID : 6306801673475  
Option 4 ID : 6306801673474  
Status : Answered  
Chosen Option : 3

Q.2 The value of  $64 \div [44 - (8 \text{ of } 3 - 16) \div 4 \times 20]$  is equal to:

- Ans
- 1. 15
  - 2. 16
  - 3. 18
  - 4. 12

Question ID : 630680428241  
Option 1 ID : 6306801671010  
Option 2 ID : 6306801671009  
Option 3 ID : 6306801671011  
Option 4 ID : 6306801671008  
Status : Answered  
Chosen Option : 2

Q.3 The value of  $5\frac{1}{4} - \left[3\frac{1}{2} - \left\{\frac{5}{6} - \left(\frac{3}{5} \times \frac{1}{10} \div \frac{4}{15}\right)\right\}\right]$  is:

- Ans
- 1.  $2\frac{43}{120}$
  - 2.  $1\frac{81}{120}$
  - 3.  $1\frac{97}{120}$
  - 4.  $2\frac{47}{120}$

Question ID : 630680428267  
Option 1 ID : 6306801671114  
Option 2 ID : 6306801671112  
Option 3 ID : 6306801671115  
Option 4 ID : 6306801671113  
Status : Not Attempted and Marked For Review  
Chosen Option : --

Q.4 The following table shows the classification of 100 students based on the marks obtained by them in Maths and Science in an examination.

Subjects	Marks out of 100				
	80 and above	60 and above	40 and above	20 and above	0 and above
Maths	12	35	80	94	100
Science	16	43	76	88	100
Average (Aggregate)	14	39	78	91	100

Find the number of students scoring less than 40% marks in aggregates.

- Ans
- 1. 28
  - 2. 26
  - 3. 24
  - 4. 22

Question ID : 630680428284  
Option 1 ID : 6306801671183  
Option 2 ID : 6306801671182  
Option 3 ID : 6306801671181  
Option 4 ID : 6306801671180  
Status : Answered  
Chosen Option : 4

Q.5 S drives his car and covers 37 km and 500 m in 90 minutes. What is his average speed (in km/h)?

- Ans
- 1. 25
  - 2. 20
  - 3. 40
  - 4. 22.5

Question ID : 630680428720  
Option 1 ID : 6306801672924  
Option 2 ID : 6306801672925  
Option 3 ID : 6306801672927  
Option 4 ID : 6306801672926  
Status : Answered  
Chosen Option : 1

Q.6 Which of the following statements is/are correct?

- A. A triangle can have all angles less than  $60^\circ$ .
- B. A triangle can have one obtuse angle.
- C. A triangle can have two right angles.
- D. A triangle can have two acute angles.

- Ans
- 1. A
  - 2. B and D
  - 3. B
  - 4. A and C

Question ID : 630680421461  
Option 1 ID : 6306801644307  
Option 2 ID : 6306801644310  
Option 3 ID : 6306801644309  
Option 4 ID : 6306801644308  
Status : Answered  
Chosen Option : 2

Q.7 If  $x [-5 \{-4(-a)\}] + 6 [-3 \{-3(-a)\}] = 6a$ , then the value of x is:

Ans  1. -3

2. -1

3. 2

4. 0

Question ID : 630680428052

Option 1 ID : 6306801670252

Option 2 ID : 6306801670254

Option 3 ID : 6306801670253

Option 4 ID : 6306801670255

Status : **Not Attempted and  
Marked For Review**

Chosen Option : --

Q.8 If  $a + 2b + 3c = 0$ , then what is the value of  $(a^3 + 8b^3 + 27c^3)$ ?

Ans  1. 18 abc

2. 12 abc

3. 6 abc

4. 0

Question ID : 630680413561

Option 1 ID : 6306801613068

Option 2 ID : 6306801613069

Option 3 ID : 6306801613070

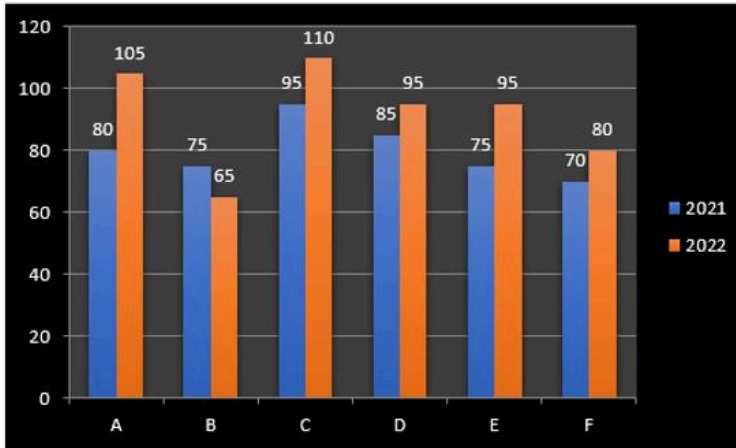
Option 4 ID : 6306801613071

Status : **Answered**

Chosen Option : 4

Adda247

Q.9 The following bar graph shows the sales (in thousands) of magazines from six branches (A, B, C, D, E and F) of a publishing company during two consecutive years 2021 and 2022.



What percentage of the total sales of branch C for both years is the total sales of branch F for both years? (round your answer up to two decimal places)

- Ans
- 1. 53.25%
  - 2. 85.25%
  - 3. 73.17%
  - 4. 65.21%

Question ID : 630680344795  
Option 1 ID : 6306801341489  
Option 2 ID : 6306801341492  
Option 3 ID : 6306801341491  
Option 4 ID : 6306801341490

Status : Answered

Chosen Option : 1

Q.10 A and B together can complete a piece of work in 25 days, B and C together can complete the same piece of work in 36 days, while C and A together can complete it in 30 days. If A, B, C, and D together can complete this piece of work in 18 days, then in how many days can D alone complete this piece of work?

- Ans
- 1. 210
  - 2. 180
  - 3. 200
  - 4. 225

Question ID : 630680428435  
Option 1 ID : 6306801671784  
Option 2 ID : 6306801671787  
Option 3 ID : 6306801671786  
Option 4 ID : 6306801671785

Status : Not Attempted and Marked For Review

Chosen Option : --



Q.11 Anwasha's marks in a class text of Sanskrit were incorrectly entered as 99 instead of 66. If there are 55 students in the class, then what is the increment in the average marks of the class in Sanskrit because of this typing error?

- Ans
- 1. 0.4
  - 2. 0.8
  - 3. 0.6
  - 4. 0.2

Question ID : 630680869675  
Option 1 ID : 6306803406067  
Option 2 ID : 6306803406069  
Option 3 ID : 6306803406068  
Option 4 ID : 6306803406066  
Status : Answered  
Chosen Option : 3

Q.12 Bhavani spends 68% of her income. Her income increases by 15% and her expenditure increases by 10%. How much is the increase in the percentage of saving? (Use decimal up to 2 digits)

- Ans
- 1. 24.80%
  - 2. 20.57%
  - 3. 28.42%
  - 4. 25.62%

Question ID : 630680488633  
Option 1 ID : 6306801908553  
Option 2 ID : 6306801908554  
Option 3 ID : 6306801908552  
Option 4 ID : 6306801908551  
Status : Answered  
Chosen Option : 2

Q.13 One laddoo with a radius of 5 cm belongs to a shopkeeper. How many laddoos of radius 2.5 cm may be created from the same one laddoo?

- Ans
- 1. 8
  - 2. 4
  - 3. 6
  - 4. 2

Question ID : 63068076287  
Option 1 ID : 630680295256  
Option 2 ID : 630680295254  
Option 3 ID : 630680295255  
Option 4 ID : 630680295253  
Status : Answered  
Chosen Option : 1

**Q.14** Of the three angles of a triangle, one is twice the smallest and another one is thrice the smallest. Find the value of the smallest angle.

- Ans
- 1.  $65^\circ$
  - 2.  $60^\circ$
  - 3.  $30^\circ$
  - 4.  $45^\circ$

Question ID : 630680421466  
Option 1 ID : 6306801644329  
Option 2 ID : 6306801644328  
Option 3 ID : 6306801644327  
Option 4 ID : 6306801644330  
Status : Answered  
Chosen Option : 3

**Q.15** The cost of painting a spherical vessel of diameter 14 cm is ₹21,560. What is the cost of painting (in ₹) per square centimetre? (Use  $\pi = \frac{22}{7}$ )

- Ans
- 1. 32
  - 2. 35
  - 3. 28
  - 4. 30

Question ID : 630680421555  
Option 1 ID : 6306801644685  
Option 2 ID : 6306801644686  
Option 3 ID : 6306801644683  
Option 4 ID : 6306801644684  
Status : Answered  
Chosen Option : 2

**Q.16** Two trains 230 m and 270 m long are running in opposite directions at speeds of 42 km/h and 48 km/h, respectively. They cross each other in:

- Ans
- 1. 22 seconds
  - 2. 20 seconds
  - 3. 25 seconds
  - 4. 30 seconds

Question ID : 630680428465  
Option 1 ID : 6306801671905  
Option 2 ID : 6306801671906  
Option 3 ID : 6306801671904  
Option 4 ID : 6306801671907  
Status : Answered  
Chosen Option : 2

Q.17 If  $x = 110$ ,  $y = 111$ ,  $z = 112$ , then find the value of  $x^3 + y^3 + z^3 - 3xyz$ .

- Ans  1. 999  
 2. 995  
 3. 997  
 4. 991

Question ID : 630680413510  
Option 1 ID : 6306801612867  
Option 2 ID : 6306801612865  
Option 3 ID : 6306801612866  
Option 4 ID : 6306801612864  
Status : Answered  
Chosen Option : 1

Q.18 A retailer marks up his goods by 130% and offers 25% discount. What will be the selling price (in ₹) if the cost price is ₹ 1600?

- Ans  1. 2760  
 2. 1980  
 3. 3680  
 4. 1765

Question ID : 630680427983  
Option 1 ID : 6306801669978  
Option 2 ID : 6306801669977  
Option 3 ID : 6306801669979  
Option 4 ID : 6306801669976  
Status : Answered  
Chosen Option : 1

Q.19 The following table gives the information of number of students from various schools playing various games: (one student play one game only)

Game/School	A	B	C	D	E
Cricket	100	150	200	300	200
Tennis	200	220	210	210	230
Football	150	170	130	150	150
Basket ball	180	170	150	130	120
Badminton	100	150	120	130	150

The difference between the total number of students playing cricket from all the schools and the total number of students playing Tennis from all the schools is:

- Ans  1. 120  
 2. 80  
 3. 100  
 4. 150

Question ID : 630680428299  
Option 1 ID : 6306801671242  
Option 2 ID : 6306801671240  
Option 3 ID : 6306801671241  
Option 4 ID : 6306801671243  
Status : Answered  
Chosen Option : 1

Q.20 A boatman rows 2 km in 10 mins, along the stream and 12 km in 2 hours against the stream. What is the speed of the stream?

- Ans
- 1. 4 km/h
  - 2. 3.5 km/h
  - 3. 3 km/h
  - 4. 2.5 km/h

Question ID : 630680869704  
Option 1 ID : 6306803406185  
Option 2 ID : 6306803406182  
Option 3 ID : 6306803406183  
Option 4 ID : 6306803406184  
Status : Answered  
Chosen Option : 3

Q.21 In an election between two candidates, the candidate who gets 35% of the votes polled is defeated by 15,900 votes. What is the total number of votes polled?

- Ans
- 1. 45,000
  - 2. 35,000
  - 3. 43,000
  - 4. 53,000

Question ID : 630680429148  
Option 1 ID : 6306801674636  
Option 2 ID : 6306801674637  
Option 3 ID : 6306801674639  
Option 4 ID : 6306801674638  
Status : Answered  
Chosen Option : 4

Q.22

The value of  $1 - \frac{1}{1 + \frac{1}{2 - \frac{1}{2 + \frac{1}{3}}}}$  is:

Ans

- 1.  $\frac{7}{18}$
- 2.  $\frac{3}{11}$
- 3.  $\frac{7}{15}$
- 4.  $\frac{3}{16}$

Question ID : 630680428270  
Option 1 ID : 6306801671126  
Option 2 ID : 6306801671127  
Option 3 ID : 6306801671125  
Option 4 ID : 6306801671124  
Status : Answered  
Chosen Option : 1

Q.23 A boat covers 24 km upstream and 36 km downstream in 10 hours, and 36 km upstream and 24 km downstream in 12 hours. The speed of the current is:

- Ans
- 1.  $\frac{33 \text{ km}}{13 \text{ h}}$
  - 2.  $\frac{26 \text{ km}}{9 \text{ h}}$
  - 3.  $\frac{24 \text{ km}}{7 \text{ h}}$
  - 4.  $\frac{25 \text{ km}}{8 \text{ h}}$

Question ID : 630680428811

Option 1 ID : 6306801673289

Option 2 ID : 6306801673288

Option 3 ID : 6306801673290

Option 4 ID : 6306801673291

Status : Not Answered

Chosen Option : --

Q.24 A certain amount of money becomes thrice in 5 years at compound interest. How many years it will take to become 9 times?

- Ans
- 1. 15 years
  - 2. 10 years
  - 3. 8 years
  - 4. 25 years

Question ID : 63068076114

Option 1 ID : 630680294563

Option 2 ID : 630680294564

Option 3 ID : 630680294562

Option 4 ID : 630680294561

Status : Answered

Chosen Option : 4

Q.25 Simplify  $[25 - (-4)\{9 - (6 - 2)\}] \div [3 \times \{6 + (-3) \times (-3)\}]$ .

- Ans
- 1. 1
  - 2. 6
  - 3. 4
  - 4. 2

Question ID : 630680428119

Option 1 ID : 6306801670521

Option 2 ID : 6306801670523

Option 3 ID : 6306801670522

Option 4 ID : 6306801670520

Status : Answered

Chosen Option : 1

Q.26

Simplify

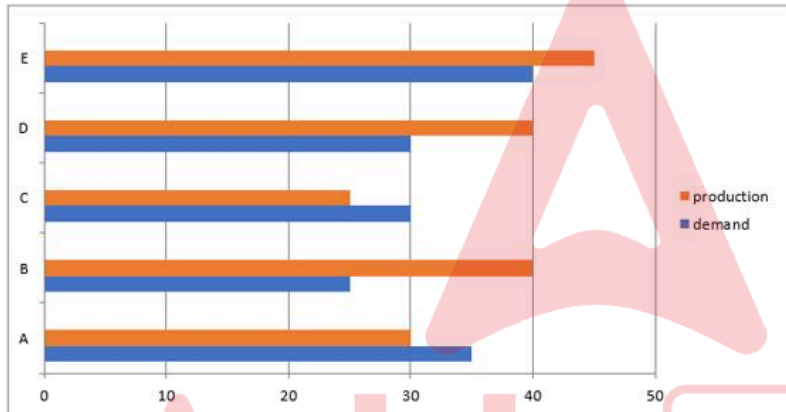
$$1898 \div \left[ \frac{13}{4} \times (35 + 45) - \frac{91}{4} \right]$$

- Ans
- 1. 4
  - 2. 8
  - 3. 12
  - 4. 16

Question ID : 630680428071  
 Option 1 ID : 6306801670328  
 Option 2 ID : 6306801670329  
 Option 3 ID : 6306801670330  
 Option 4 ID : 6306801670331  
 Status : Answered  
 Chosen Option : 2

Q.27

The following bar graph indicates the demand and production (in hundreds) of 5 companies A, B, C, D and E. X-axis indicates the demand and production (in hundreds) and Y-axis indicates the companies. Study the bar graph carefully and answer the question that follows.



Find the difference between the average demand and average production of the five companies taken together.

- Ans
- 1. 500
  - 2. 2000
  - 3. 1000
  - 4. 400

Question ID : 630680387132  
 Option 1 ID : 6306801509238  
 Option 2 ID : 6306801509241  
 Option 3 ID : 6306801509239  
 Option 4 ID : 6306801509240  
 Status : Answered  
 Chosen Option : 4

Q.28 In how many years will ₹2,500 be invested at the rate of 12% per annum simple interest, which amounts to ₹4,900?

- Ans
- 1. 1.4
  - 2. 2.6
  - 3. 3.8
  - 4. 4.2

Question ID : 630680428063  
Option 1 ID : 6306801670297  
Option 2 ID : 6306801670298  
Option 3 ID : 6306801670299  
Option 4 ID : 6306801670296  
Status : Answered  
Chosen Option : 1

Q.29 The radius of the base and height of a cone are 5 cm and 6 cm, respectively, whereas the radius of the base and height of a cylinder are 2.5 cm and 3 cm, respectively. The ratio of the volume of the cone to that of the cylinder is:

(Where  $\pi = \frac{22}{7}$ )

- Ans
- 1. 8 : 5
  - 2. 3 : 5
  - 3. 9 : 4
  - 4. 8 : 3

Question ID : 630680421609  
Option 1 ID : 6306801644899  
Option 2 ID : 6306801644902  
Option 3 ID : 6306801644901  
Option 4 ID : 6306801644900  
Status : Answered  
Chosen Option : 4

Q.30 Simplify the following expression:

$$\frac{3.2 \times 3.2 - 0.2 \times 0.2}{0.2 \times 0.2 - 2 \times 0.2 \times 3.2 + 3.2 \times 3.2}$$

- Ans
- 1.  $\frac{13}{15}$
  - 2.  $\frac{19}{15}$
  - 3.  $\frac{17}{15}$
  - 4.  $\frac{11}{15}$

Question ID : 630680413599  
Option 1 ID : 6306801613221  
Option 2 ID : 6306801613223  
Option 3 ID : 6306801613220  
Option 4 ID : 6306801613222  
Status : Answered  
Chosen Option : 1

Q.31 A shopkeeper buys oranges at the rate of 10 oranges for ₹50 and sells them at the rate of 12 oranges for ₹74. Find his gain or loss percentage.

Ans

✓ 1.  $23\frac{1}{3}\%$  gain

✗ 2.  $25\frac{1}{3}\%$  loss

✗ 3. 25% gain

✗ 4. 30% loss

Question ID : 630680429112

Option 1 ID : 6306801674492

Option 2 ID : 6306801674494

Option 3 ID : 6306801674493

Option 4 ID : 6306801674495

Status : Answered

Chosen Option : 1

Q.32 The angles of a triangle are in the ratio 1 : 2 : 3, then find the ratio of the corresponding sides.

Ans

✓ 1.  $1 : \sqrt{3} : 2$

✗ 2.  $1 : 2 : \sqrt{3}$

✗ 3.  $1 : \sqrt{2} : 3$

✗ 4.  $1 : 2 : 3$

Question ID : 630680421530

Option 1 ID : 6306801644585

Option 2 ID : 6306801644586

Option 3 ID : 6306801644584

Option 4 ID : 6306801644583

Status : Answered

Chosen Option : 4

Q.33 Find the value of  $[(82 + 48 \div 8 \times 3) + 5 \times 6] - 7.5 \times 2$ .

Ans

✓ 1. 115

✗ 2. 125

✗ 3. 121

✗ 4. 130

Question ID : 630680428104

Option 1 ID : 6306801670461

Option 2 ID : 6306801670463

Option 3 ID : 6306801670462

Option 4 ID : 6306801670460

Status : Answered

Chosen Option : 2



Q.34 A number is first decreased by 10%, then increased by 30% and then further it is decreased by 20%. What is the net decrease percentage in the number?

Ans

1.  $4\frac{1}{5}\%$

2.  $3\frac{4}{5}\%$

3.  $6\frac{2}{5}\%$

4.  $5\frac{3}{5}\%$

Question ID : 630680428143

Option 1 ID : 6306801670618

Option 2 ID : 6306801670619

Option 3 ID : 6306801670617

Option 4 ID : 6306801670616

Status : Answered

Chosen Option : 3

Q.35

Find the value of  $\frac{1 - \cot^2 \theta}{\tan^2 \theta - 1}$ .

Ans  1.  $\tan^2 \theta$

2.  $\tan \theta$

3.  $\cot^2 \theta$

4.  $\cot \theta$

Question ID : 630680869583

Option 1 ID : 6306803405714

Option 2 ID : 6306803405715

Option 3 ID : 6306803405716

Option 4 ID : 6306803405717

Status : Not Answered

Chosen Option : --

Q.36 Ravi and Sanju together can do a job in 2 days, Sanju and Mahesh can do it in 4 days, while Ravi and Mahesh can do it in 2 days. What is the number of days required for Ravi to do the same job alone?

Ans  1. 4 days

2.  $\frac{8}{3}$  days

3.  $\frac{5}{3}$  days

4. 9 days

Question ID : 630680869700

Option 1 ID : 6306803406169

Option 2 ID : 6306803406168

Option 3 ID : 6306803406166

Option 4 ID : 6306803406167

Status : Answered

Chosen Option : 2

Q.37 A seller offers a discount of 12% if the total sale price of different products purchased by a single customer is below ₹3,000, and discount of 15% if the total sale value of all the products exceeds ₹3,000. A shirt costing ₹900 was sold to Anand after earning a margin of 9% and also a jacket costing ₹1,900 was sold to him after a margin of 6%. How much does Anand have to pay (in ₹) for the final settlement of the bill?

- Ans
- 1. 2,645.60
  - 2. 2,953.60
  - 3. 3,005.40
  - 4. 2,635.60

Question ID : 630680428562  
Option 1 ID : 6306801672292  
Option 2 ID : 6306801672294  
Option 3 ID : 6306801672295  
Option 4 ID : 6306801672293  
Status : Not Answered  
Chosen Option : --

Q.38 The radius of a hemispherical bowl is 9 cm. The capacity of the bowls is:

(Use  $\pi = \frac{22}{7}$ )

- Ans
- 1. 1625.37 cm<sup>3</sup>
  - 2. 1821.47 cm<sup>3</sup>
  - 3. 1428.78 cm<sup>3</sup>
  - 4. 1527.43 cm<sup>3</sup>

Question ID : 630680421606  
Option 1 ID : 6306801644887  
Option 2 ID : 6306801644888  
Option 3 ID : 6306801644889  
Option 4 ID : 6306801644890  
Status : Not Answered  
Chosen Option : --

Q.39

If  $\frac{(\sec A + \tan A)}{\sec A - \tan A} = 2 \frac{51}{79}$ , then the value of sin A is equal to:

- Ans
- 1.  $\frac{87}{169}$
  - 2.  $\frac{65}{144}$
  - 3.  $\frac{77}{144}$
  - 4.  $\frac{61}{169}$

Question ID : 630680344635  
Option 1 ID : 6306801340852  
Option 2 ID : 6306801340850  
Option 3 ID : 6306801340851  
Option 4 ID : 6306801340849  
Status : Not Answered  
Chosen Option : --

Q.40 Simplify  $20 \div 5$  of  $4 \times 8 + 6 \div 24$  of  $3 \times 48 - 6 \div 18 \times 9$ .

- Ans  1. 6  
 2. 4  
 3. 9  
 4. 1.125

Question ID : 630680444362  
Option 1 ID : 6306801756558  
Option 2 ID : 6306801756557  
Option 3 ID : 6306801756556  
Option 4 ID : 6306801756555  
Status : Answered  
Chosen Option : 3

Q.41 The length of the side of a cube is 8 cm. Find the volume of the cube?

- Ans  1.  $664 \text{ cm}^3$   
 2.  $612 \text{ cm}^3$   
 3.  $512 \text{ cm}^3$   
 4.  $564 \text{ cm}^3$

Question ID : 630680421560  
Option 1 ID : 6306801644706  
Option 2 ID : 6306801644705  
Option 3 ID : 6306801644703  
Option 4 ID : 6306801644704  
Status : Answered  
Chosen Option : 3

Q.42 A reduction of 7.5% in the cost price of a commodity enables a shopkeeper to purchase 15 kg more than what he previously purchased for a sum of ₹7,400. In order to make a profit of 32.5% on the pre-reduction cost price of the commodity, at what price (in ₹) per kg should the commodity be sold?

- Ans  1. 54  
 2. 52  
 3. 51  
 4. 53

Question ID : 630680321428  
Option 1 ID : 6306801250422  
Option 2 ID : 6306801250423  
Option 3 ID : 6306801250424  
Option 4 ID : 6306801250421  
Status : Not Answered  
Chosen Option : --

Q.43 A sum of ₹17,600 was divided between Jeevan, Praveen and Kanan, such that the ratio of the sums received by Jeevan and Praveen was 5 : 8, while the ratio of the sums received by Praveen and Kanan was 3 : 2. How much money did Jeevan receive as his share?

- Ans
- 1. ₹4,850
  - 2. ₹4,750
  - 3. ₹4,800
  - 4. ₹4,900

Question ID : 630680428448

Option 1 ID : 6306801671838

Option 2 ID : 6306801671836

Option 3 ID : 6306801671837

Option 4 ID : 6306801671839

Status : Not Answered

Chosen Option : --

Q.44 The following table shows the gross turnover (in crores) of a company over 5 years.

Year	Gross Turnover
2016	12
2017	18
2018	25
2019	25
2020	30

By what percentage is the gross turnover of 2020 higher than the gross turnover of 2018?

- Ans
- 1. 20%
  - 2. 5%
  - 3. 25%
  - 4. 13%

Question ID : 630680394811

Option 1 ID : 6306801539530

Option 2 ID : 6306801539532

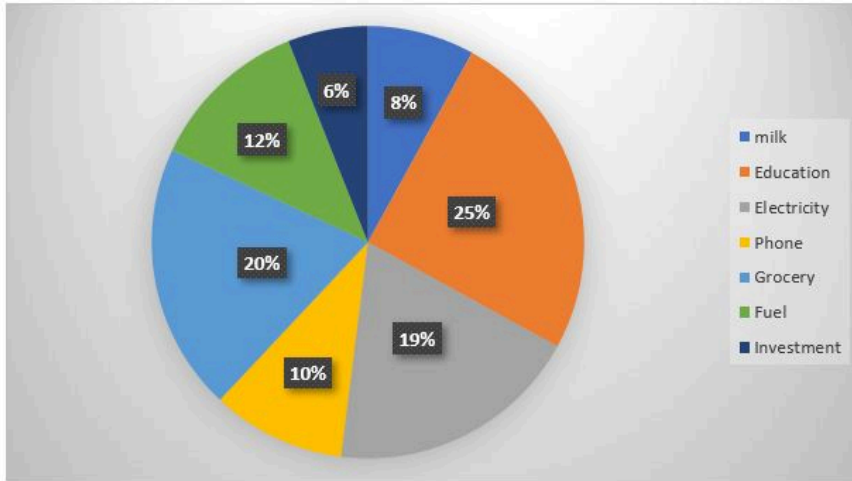
Option 3 ID : 6306801539531

Option 4 ID : 6306801539533

Status : Answered

Chosen Option : 2

**Q.45** The given pie chart shows the budget estimated by a family for their monthly expenses. Monthly expenses = ₹58,000.



Find the difference between the amount budget amount for grocery and electricity to the amount spent on grocery and electricity, if the family actually spent ₹18,875 on both grocery and electricity.

- Ans**
- 1. ₹4,573
  - 2. ₹4,375
  - 3. ₹3,745
  - 4. ₹3,547

Question ID : 630680381359  
Option 1 ID : 6306801486390  
Option 2 ID : 6306801486387  
Option 3 ID : 6306801486388  
Option 4 ID : 6306801486389  
Status : Not Answered  
Chosen Option : --

Adda247

**Q.46** Study the given tables and answer the question that follows.

The tables show the number of candidates (in lakh) appearing in an entrance exam from four different cities and the ratio of candidates passing and failing in the same.

City	P	Q	R	S
Number of candidates	1.10	2.26	2.12	1.46

Ratio of candidates passing and failing within the city:

City	Passing	Failing
P	6	5
Q	3	7
R	5	7
S	3	5

The number of candidates passing the exam from city Q is what percentage of the total number of candidates appearing from all the cities together (rounded off to 2 decimal places)?

- Ans**
- 1. 11.25%
  - 2. 10.70%
  - 3. 12.93%
  - 4. 9.77%

Question ID : 630680428317

Option 1 ID : 6306801671313

Option 2 ID : 6306801671314

Option 3 ID : 6306801671312

Option 4 ID : 6306801671315

Status : Not Answered

Chosen Option : --

**Q.47** The value of  $29 - [(48 \div 12) + 2 \times (8 \div 4 + 4)]$  is equal to:

- Ans**
- 1. 15
  - 2. 21
  - 3. 19
  - 4. 13

Question ID : 630680428244

Option 1 ID : 6306801671022

Option 2 ID : 6306801671021

Option 3 ID : 6306801671023

Option 4 ID : 6306801671020

Status : Not Answered

Chosen Option : --

Q.48 Solve the equation for A (in degrees):

$$2 \cos^2 A + 3 \cos A - 2 = 0, \quad 0 < A < 90^\circ$$

- Ans
- 1.  $45^\circ$
  - 2.  $60^\circ$
  - 3.  $80^\circ$
  - 4.  $30^\circ$

Question ID : 630680421421  
Option 1 ID : 6306801644148  
Option 2 ID : 6306801644149  
Option 3 ID : 6306801644150  
Option 4 ID : 6306801644147  
Status : Not Answered  
Chosen Option : --

Q.49 Find the area (in  $\text{cm}^2$ ) of the sector of a circle of radius 21 cm

with a central angle of  $60^\circ$ . [Use  $\pi = \frac{22}{7}$ ]

- Ans
- 1. 302
  - 2. 289
  - 3. 231
  - 4. 245

Question ID : 630680421368  
Option 1 ID : 6306801643938  
Option 2 ID : 6306801643937  
Option 3 ID : 6306801643935  
Option 4 ID : 6306801643936  
Status : Not Answered  
Chosen Option : --

Q.50 Simplify  $\frac{\cos 13^\circ + \sin 13^\circ}{\cos 13^\circ - \sin 13^\circ}$

- Ans
- 1.  $\cot 58^\circ$
  - 2.  $\cos 26^\circ$
  - 3.  $\tan 32^\circ$
  - 4.  $\tan 58^\circ$

Question ID : 630680383492  
Option 1 ID : 6306801494865  
Option 2 ID : 6306801494866  
Option 3 ID : 6306801494863  
Option 4 ID : 6306801494864  
Status : Not Answered  
Chosen Option : --

**Q.1** Select the option that can be used as a one-word substitute for the given group of words.

The period of time in a person's life when they are developing into an adult

Ans  1. Adolescence

2. Adultery

3. Teenage

4. Childhood

Question ID : 630680414825

Option 1 ID : 6306801618044

Option 2 ID : 6306801618043

Option 3 ID : 6306801618046

Option 4 ID : 6306801618045

Status : Answered

Chosen Option : 1

**Q.2** The following sentence has been divided into parts. One of them contains an error.

Select the part that contains the error from the given options.

Mr. Thomas / is going / to buy / horse.

Ans  1. is going

2. Mr. Thomas

3. to buy

4. horse

Question ID : 630680184895

Option 1 ID : 630680716542

Option 2 ID : 630680716541

Option 3 ID : 630680716543

Option 4 ID : 630680716544

Status : Answered

Chosen Option : 1

**Q.3** The following sentence has been divided into parts. One of them may contain an error.

Select the part that contains the error from the given options. If you don't find any

error, mark 'No error' as your answer.

By the time I reaching / the metro station, / the train had departed.

Ans  1. no error

2. the metro station

3. the train had departed

4. By the time I reaching

Question ID : 630680156567

Option 1 ID : 630680605927

Option 2 ID : 630680605925

Option 3 ID : 630680605926

Option 4 ID : 630680605924

Status : Answered

Chosen Option : 4



**Q.4** Select the most appropriate option to substitute the underlined segment in the given sentence.

Rajan's caused extremely painful headaches.

- Ans
- 1. excruciating
  - 2. horrible
  - 3. extreme
  - 4. devastating

Question ID : 630680403933  
Option 1 ID : 6306801575219  
Option 2 ID : 6306801575221  
Option 3 ID : 6306801575218  
Option 4 ID : 6306801575220  
Status : Answered  
Chosen Option : 2

**Q.5** Select the most appropriate synonym of the given word.  
Pacify

- Ans
- 1. Rebuke
  - 2. Blame
  - 3. Strengthen
  - 4. Soothe

Question ID : 630680204301  
Option 1 ID : 630680792287  
Option 2 ID : 630680792290  
Option 3 ID : 630680792288  
Option 4 ID : 630680792289  
Status : Answered  
Chosen Option : 3

**Q.6** Select the most appropriate option that can substitute the underlined segment in the given sentence.

The company plans to expand its business to the international market.

- Ans
- 1. to reduce
  - 2. to contract
  - 3. to increase
  - 4. to limit

Question ID : 630680414497  
Option 1 ID : 6306801616748  
Option 2 ID : 6306801616749  
Option 3 ID : 6306801616750  
Option 4 ID : 6306801616747  
Status : Answered  
Chosen Option : 3

Q.7 Select the most appropriate ANTONYM of the underlined word in the given sentence.  
The beauty of cherry blossoms is ephemeral, as the delicate pink petals bloom for only a short period.

- Ans
- 1. Uniform
  - 2. Unwavering
  - 3. Permanent
  - 4. Transient

Question ID : 630680517233  
Option 1 ID : 6306802021328  
Option 2 ID : 6306802021329  
Option 3 ID : 6306802021330  
Option 4 ID : 6306802021331  
Status : Not Answered  
Chosen Option : --

Q.8 Select the most appropriate ANTONYM of the underlined word.  
Indians tend to be quite conservative in most aspects of life, particularly in rural areas.

- Ans
- 1. Liberal
  - 2. Fantastic
  - 3. Determined
  - 4. Authentic

Question ID : 630680517280  
Option 1 ID : 6306802021517  
Option 2 ID : 6306802021519  
Option 3 ID : 6306802021516  
Option 4 ID : 6306802021518  
Status : Answered  
Chosen Option : 1

Q.9 Select the most appropriate meaning of the underlined idiom.

Despite multiple obstacles, she continued with her endeavour, demonstrating that she has nerves of steel.

- Ans
- 1. Extraordinary beauty
  - 2. An absence of fear or anxiety
  - 3. Relentless determination
  - 4. The capacity to maintain composure when stressed

Question ID : 630680517389  
Option 1 ID : 6306802021955  
Option 2 ID : 6306802021953  
Option 3 ID : 6306802021952  
Option 4 ID : 6306802021954  
Status : Answered  
Chosen Option : 2

**Q.10** Select the option that can be used as a one-word substitute for the italicised segment in the given sentence.

*Tin is easy to shape in any desired form.*

- Ans
- 1. malleable
  - 2. rigid
  - 3. immutable
  - 4. gullible

Question ID : 630680414731  
Option 1 ID : 6306801617667  
Option 2 ID : 6306801617670  
Option 3 ID : 6306801617668  
Option 4 ID : 6306801617669  
Status : Answered  
Chosen Option : 1

**Q.11** Select the most appropriate synonym of the given word.  
Dainty

- Ans
- 1. Vulgar
  - 2. Fine
  - 3. Elegant
  - 4. Sable

Question ID : 630680295222  
Option 1 ID : 6306801148613  
Option 2 ID : 6306801148615  
Option 3 ID : 6306801148612  
Option 4 ID : 6306801148614  
Status : Marked For Review  
Chosen Option : 1

**Q.12** Select the most appropriate synonym of the given word.  
Filthy

- Ans
- 1. Tidy
  - 2. Visual
  - 3. Shiny
  - 4. Dirty

Question ID : 630680204305  
Option 1 ID : 630680792306  
Option 2 ID : 630680792303  
Option 3 ID : 630680792304  
Option 4 ID : 630680792305  
Status : Answered  
Chosen Option : 4

**Q.13** Select the most appropriate idiom that can substitute the underlined words in the given sentence.

It's Christmas and everything looks so beautiful. It makes me believe that life is wonderful and pleasant.

- Ans
- 1. I'm up in the air
  - 2. I'm facing the music
  - 3. I'm changing my tune
  - 4. life is a bowl of cherries

Question ID : 630680183589

Option 1 ID : 630680711367

Option 2 ID : 630680711368

Option 3 ID : 630680711366

Option 4 ID : 630680711365

Status : Answered

Chosen Option : 4

**Q.14** Select the correctly spelt word.

- Ans
- 1. directory
  - 2. dictionary
  - 3. dispensery
  - 4. machinery

Question ID : 630680518786

Option 1 ID : 6306802027642

Option 2 ID : 6306802027641

Option 3 ID : 6306802027643

Option 4 ID : 6306802027640

Status : Answered

Chosen Option : 1

**Q.15** Select the most appropriate option to substitute the underlined part of the following sentence.

Mathew decided to complete the marathon to prove that he is still fit as a fiddle in his eighties.

- Ans
- 1. an owner of a fit horse
  - 2. a man of great qualities
  - 3. proud and unreliable
  - 4. a fit and energetic person

Question ID : 630680297863

Option 1 ID : 6306801158854

Option 2 ID : 6306801158851

Option 3 ID : 6306801158852

Option 4 ID : 6306801158853

Status : Answered

Chosen Option : 3

**Q.16** Select the most appropriate option to substitute the underlined segment in the given sentence.

The manager, decided at last to bring the stenographer to book for her illegal money transactions after trying to ignore it several times.

- Ans
- 1. bring her for a detailed investigation
  - 2. take her into great confidence
  - 3. place her in a safe supportive position
  - 4. make her accountable for her conduct

Question ID : 630680295289  
Option 1 ID : 6306801148883  
Option 2 ID : 6306801148880  
Option 3 ID : 6306801148882  
Option 4 ID : 6306801148881  
Status : Answered  
Chosen Option : 4

**Q.17** Identify the INCORRECTLY spelt word in the given sentence and select the option that rectifies the spelling error.

The idea is to encourage tourism and allow visitors to enjoy the spectacular Rockies, but to ensure that it is done in hermony with the environment.

- Ans
- 1. Enssure
  - 2. Harmony
  - 3. Encourage
  - 4. Touresm

Question ID : 630680517486  
Option 1 ID : 6306802022342  
Option 2 ID : 6306802022341  
Option 3 ID : 6306802022340  
Option 4 ID : 6306802022343  
Status : Answered  
Chosen Option : 2

**Q.18** Select the most appropriate option to fill in the blank.

Mihir's ability to think outside \_\_\_\_\_ always gives our team the upper hand when tackling complex problems.

- Ans
- 1. the room
  - 2. the cupboard
  - 3. the box
  - 4. the bowl

Question ID : 630680517319  
Option 1 ID : 6306802021675  
Option 2 ID : 6306802021672  
Option 3 ID : 6306802021673  
Option 4 ID : 6306802021674  
Status : Answered  
Chosen Option : 1

**Q.19** Select the most appropriate option that can substitute the underlined words in the given sentence.

My son will carry out my business in my absence.

- Ans  1. carry at  
 2. carry on  
 3. carry for  
 4. carry in

Question ID : 630680451978  
Option 1 ID : 6306801764989  
Option 2 ID : 6306801764986  
Option 3 ID : 6306801764988  
Option 4 ID : 6306801764987  
Status : Not Answered  
Chosen Option : --

**Q.20** Select the option that can be used as a one-word substitute for the given group of words.

The study of Man

- Ans  1. Autobiography  
 2. Anthropology  
 3. Biography  
 4. Biology

Question ID : 630680295229  
Option 1 ID : 6306801148641  
Option 2 ID : 6306801148642  
Option 3 ID : 6306801148643  
Option 4 ID : 6306801148640  
Status : Answered  
Chosen Option : 2

**Q.21** The following sentence has been divided into four segments. One of them contains an error. Select the segment that contains the error from the given options.

Last night I dreamed that / I am looking for the/ abominable snowman high / up in the Himalayas.

- Ans  1. abominable snowman high  
 2. up in the Himalayas  
 3. I am looking for the  
 4. Last night I dreamed that

Question ID : 630680156646  
Option 1 ID : 630680606242  
Option 2 ID : 630680606243  
Option 3 ID : 630680606241  
Option 4 ID : 630680606240  
Status : Not Answered  
Chosen Option : --

**Q.22** Select the most appropriate idiom that can substitute the underlined segment in the given sentence.

We need to make sure that criminals like these get more from the authorities than a very mild punishment.

Ans ✓ 1. a slap on the wrist

✗ 2. an axe to grind

✗ 3. a blessing in disguise

✗ 4. a taste of their own medicine

Question ID : 630680701372

Option 1 ID : 6306802747422

Option 2 ID : 6306802747421

Option 3 ID : 6306802747424

Option 4 ID : 6306802747423

Status : Answered

Chosen Option : 1

**Q.23** Select the option that can be used as a one-word substitute for the underlined group of words.

There was a huge fire for celebration on the occasion of Diwali.

Ans ✗ 1. Lohri

✗ 2. Flash

✓ 3. Bonfire

✗ 4. Firecracker

Question ID : 630680414819

Option 1 ID : 6306801618022

Option 2 ID : 6306801618021

Option 3 ID : 6306801618019

Option 4 ID : 6306801618020

Status : Answered

Chosen Option : 3

**Q.24** Select the INCORRECTLY spelt word.

Ans ✗ 1. granary

✗ 2. dictionary

✗ 3. directory

✓ 4. chancellor

Question ID : 630680409920

Option 1 ID : 6306801598512

Option 2 ID : 6306801598509

Option 3 ID : 6306801598510

Option 4 ID : 6306801598511

Status : Answered

Chosen Option : 4

**Q.25** In question four alternatives are given for the underlined Idiom/Phrase in the sentence. Choose the alternative which best expresses the meaning of the Idiom/Phrase.  
In life, there will be many situations where you have to choose between the devil and the deep blue sea.

- Ans**
- 1. To be in dilemma to choose
  - 2. To be in the deep sea
  - 3. To be in a good condition
  - 4. To choose wisely

Question ID : 630680517295  
Option 1 ID : 6306802021579  
Option 2 ID : 6306802021576  
Option 3 ID : 6306802021577  
Option 4 ID : 6306802021578  
Status : Answered  
Chosen Option : 1

**Q.26** Select the option that can be used as a one-word substitute for the given group of words.  
A film shown during the day, especially in the afternoon

- Ans**
- 1. Dramatics
  - 2. Matinee
  - 3. Cinema
  - 4. Theatre

Question ID : 630680172794  
Option 1 ID : 630680669568  
Option 2 ID : 630680669569  
Option 3 ID : 630680669570  
Option 4 ID : 630680669571  
Status : Not Answered  
Chosen Option : --

**Q.27** Select the option that expresses the meaning of the underlined segment.  
The regulation bans any direct or indirect promotion through radio or television of supernatural practices.

- Ans**
- 1. Questionable
  - 2. Obtuse
  - 3. Occult
  - 4. Evident

Question ID : 630680377989  
Option 1 ID : 6306801473015  
Option 2 ID : 6306801473017  
Option 3 ID : 6306801473016  
Option 4 ID : 6306801473018  
Status : Answered  
Chosen Option : 3



**Q.28** Select the most appropriate option to substitute the underlined segment in the given sentence.

It is a fact that the same judgement can often be taken by more than one way.

- Ans
- 1. be taken on more than
  - 2. be taken in more than
  - 3. be taken for more than
  - 4. be taken of more than

Question ID : 630680414523  
Option 1 ID : 6306801616853  
Option 2 ID : 6306801616854  
Option 3 ID : 6306801616851  
Option 4 ID : 6306801616852  
Status : Not Answered  
Chosen Option : --

**Q.29** Parts of the following sentence have been given as options. Select the option that contains an error.  
My father is comparatively better today.

- Ans
- 1. comparatively better
  - 2. is
  - 3. My father
  - 4. today.

Question ID : 630680415248  
Option 1 ID : 6306801619741  
Option 2 ID : 6306801619740  
Option 3 ID : 6306801619739  
Option 4 ID : 6306801619742  
Status : Answered  
Chosen Option : 2

**Q.30** Select the sentence that has the correct use of words and spellings from the options given below.

- Ans
- 1. The skilled surgeon delicatly performed the intricate procedure, saving the patient's life with his stedy hands and unwavering focus.
  - 2. The skilled surgeon delicately performed the intreccate procedure, saving the patient's life with his steady hands and unwavering focus.
  - 3. The skiled surgeon delicatly performed the intricate procedure, saving the patient's life with his stedy hands and unwavering focus.
  - 4. The skilled surgeon delicately performed the intricate procedure, saving the patient's life with his steady hands and unwavering focus.

Question ID : 630680410005  
Option 1 ID : 6306801598850  
Option 2 ID : 6306801598851  
Option 3 ID : 6306801598849  
Option 4 ID : 6306801598852  
Status : Not Answered  
Chosen Option : --

**Q.31** Select the option that can be used as a one-word substitute for the given group of words.

**A list of books**

- Ans**
- 1. Lexicon
  - 2. Manuscript
  - 3. Bibliography
  - 4. Catalogue

Question ID : 630680414827  
Option 1 ID : 6306801618054  
Option 2 ID : 6306801618051  
Option 3 ID : 6306801618052  
Option 4 ID : 6306801618053  
Status : Answered  
Chosen Option : 4

**Q.32** Select the most appropriate segment to substitute the underlined words in the given sentence.

He always used to say that he was not a beggar by choice and if someone could employ him, he would like to eat.

- Ans**
- 1. love to work
  - 2. listen to me
  - 3. linger at work
  - 4. live to work

Question ID : 630680435036  
Option 1 ID : 6306801698062  
Option 2 ID : 6306801698060  
Option 3 ID : 6306801698061  
Option 4 ID : 6306801698059  
Status : Answered  
Chosen Option : 1

**Q.33** Select the most appropriate meaning of the given idiom.  
**Beat around the bush.**

- Ans**
- 1. To go around the bush.
  - 2. To live around the bush.
  - 3. To avoid talking about what is important.
  - 4. To talk about something important.

Question ID : 630680517320  
Option 1 ID : 6306802021678  
Option 2 ID : 6306802021679  
Option 3 ID : 6306802021677  
Option 4 ID : 6306802021676  
Status : Answered  
Chosen Option : 3

**Q.34** Select the most appropriate idiom that can substitute the underlined segment in the given sentence.

I don't know which career he will choose. He delays making strong decisions.

- Ans
- 1. sits on the fence
  - 2. is as clean as a whistle
  - 3. turns a blind eye
  - 4. spills the beans

Question ID : 630680435645  
Option 1 ID : 6306801700511  
Option 2 ID : 6306801700510  
Option 3 ID : 6306801700509  
Option 4 ID : 6306801700512  
Status : Answered  
Chosen Option : 1

**Q.35** The following sentence has been split into four segments. Identify the segment that contains a grammatical error.

If I have recovered from fever, / I will start going / for swimming classes / from tomorrow.

- Ans
- 1. I will start going
  - 2. for swimming classes
  - 3. from tomorrow
  - 4. If I have recovered from fever

Question ID : 630680172390  
Option 1 ID : 630680667985  
Option 2 ID : 630680667986  
Option 3 ID : 630680667987  
Option 4 ID : 630680667984  
Status : Not Answered  
Chosen Option : --

**Q.36** Which of the following words has a similar meaning to the underlined word?  
Numerous tremors without any tectonic plate movement have baffled geologists.

- Ans
- 1. Angered
  - 2. Irritated
  - 3. Perplexed
  - 4. Amused

Question ID : 630680360071  
Option 1 ID : 6306801402229  
Option 2 ID : 6306801402231  
Option 3 ID : 6306801402230  
Option 4 ID : 6306801402232  
Status : Answered  
Chosen Option : 3

Q.37 Which is the right set of ANTONYMS from the options for 'Confidential'?

- Ans  1. Familiar, Revealed  
 2. Offstage, Sneaking  
 3. Public, Concealed  
 4. Hushed, Common

Question ID : 630680517276  
Option 1 ID : 6306802021502  
Option 2 ID : 6306802021500  
Option 3 ID : 6306802021501  
Option 4 ID : 6306802021503  
Status : Answered  
Chosen Option : 1

Q.38 Select the most appropriate synonym of the given word.  
Voracious

- Ans  1. Quenched  
 2. Appreciate  
 3. Compensated  
 4. Greedy

Question ID : 630680295957  
Option 1 ID : 6306801151540  
Option 2 ID : 6306801151542  
Option 3 ID : 6306801151541  
Option 4 ID : 6306801151543  
Status : Not Answered  
Chosen Option : --

Q.39 Choose the INCORRECTLY spelt word in the given sentence.  
It may seem pretentious to say so but I cannot live without my essential articles.

- Ans  1. essential  
 2. cannot  
 3. articles  
 4. pretentious

Question ID : 630680409875  
Option 1 ID : 6306801598331  
Option 2 ID : 6306801598330  
Option 3 ID : 6306801598332  
Option 4 ID : 6306801598329  
Status : Answered  
Chosen Option : 4

Q.40 Select the INCORRECTLY spelt word.

- Ans  1. Progame  
 2. Unexpected  
 3. Pilgrimage  
 4. Campaign

Question ID : 630680517488  
Option 1 ID : 6306802022348  
Option 2 ID : 6306802022350  
Option 3 ID : 6306802022351  
Option 4 ID : 6306802022349  
Status : Answered  
Chosen Option : 1

**Comprehension:**

In the following passage, some words have been deleted. Read the passage carefully and select the most appropriate option to fill in each blank.

"Can I come along with you on your fishing trip, please?" asked Millie. Her two elder brothers (1)\_\_\_\_\_ at her scornfully. "Fishing is a man's (2) \_\_\_\_\_," said her older brother, Derek. "Girls are not (3) \_\_\_\_\_ at fishing." (4) \_\_\_\_\_ a while, however, Millie managed to persuade her brothers to take her (5) \_\_\_\_\_. When they reached the fishing pond, the two brothers wandered off by themselves.

**SubQuestion No : 41****Q.41 Select the correct option to fill blank 1.**

- Ans  1. looked  
 2. observed  
 3. saw  
 4. watched

Question ID : 630680515012

Option 1 ID : 6306802012610

Option 2 ID : 6306802012612

Option 3 ID : 6306802012609

Option 4 ID : 6306802012611

Status : Not Answered

Chosen Option : --

**Comprehension:**

In the following passage, some words have been deleted. Read the passage carefully and select the most appropriate option to fill in each blank.

"Can I come along with you on your fishing trip, please?" asked Millie. Her two elder brothers (1)\_\_\_\_\_ at her scornfully. "Fishing is a man's (2) \_\_\_\_\_," said her older brother, Derek. "Girls are not (3) \_\_\_\_\_ at fishing." (4) \_\_\_\_\_ a while, however, Millie managed to persuade her brothers to take her (5) \_\_\_\_\_. When they reached the fishing pond, the two brothers wandered off by themselves.

**SubQuestion No : 42****Q.42 Select the correct option to fill blank 2.**

- Ans  1. matches  
 2. gaming  
 3. competition  
 4. sport

Question ID : 630680515013

Option 1 ID : 6306802012615

Option 2 ID : 6306802012613

Option 3 ID : 6306802012616

Option 4 ID : 6306802012614

Status : Answered

Chosen Option : 4

**Comprehension:**

In the following passage, some words have been deleted. Read the passage carefully and select the most appropriate option to fill in each blank.

"Can I come along with you on your fishing trip, please?" asked Millie. Her two elder brothers (1)\_\_\_\_\_ at her scornfully. "Fishing is a man's (2) \_\_\_\_\_," said her older brother, Derek. "Girls are not (3) \_\_\_\_\_ at fishing." (4) \_\_\_\_\_ a while, however, Millie managed to persuade her brothers to take her (5) \_\_\_\_\_. When they reached the fishing pond, the two brothers wandered off by themselves.

**SubQuestion No : 43**

**Q.43 Select the correct option to fill blank 3.**

- Ans  1. good  
 2. sound  
 3. likeable  
 4. acceptable

Question ID : 630680515014

Option 1 ID : 6306802012618

Option 2 ID : 6306802012620

Option 3 ID : 6306802012617

Option 4 ID : 6306802012619

Status : Answered

Chosen Option : 1

**Comprehension:**

In the following passage, some words have been deleted. Read the passage carefully and select the most appropriate option to fill in each blank.

"Can I come along with you on your fishing trip, please?" asked Millie. Her two elder brothers (1)\_\_\_\_\_ at her scornfully. "Fishing is a man's (2) \_\_\_\_\_," said her older brother, Derek. "Girls are not (3) \_\_\_\_\_ at fishing." (4) \_\_\_\_\_ a while, however, Millie managed to persuade her brothers to take her (5) \_\_\_\_\_. When they reached the fishing pond, the two brothers wandered off by themselves.

**SubQuestion No : 44**

**Q.44 Select the correct option to fill blank 4.**

- Ans  1. Nearly  
 2. After  
 3. Then  
 4. Before

Question ID : 630680515015

Option 1 ID : 6306802012624

Option 2 ID : 6306802012623

Option 3 ID : 6306802012622

Option 4 ID : 6306802012621

Status : Answered

Chosen Option : 2

**Comprehension:**

In the following passage, some words have been deleted. Read the passage carefully and select the most appropriate option to fill in each blank.

"Can I come along with you on your fishing trip, please?" asked Millie. Her two elder brothers (1)\_\_\_\_\_ at her scornfully. "Fishing is a man's (2) \_\_\_\_\_," said her older brother, Derek. "Girls are not (3) \_\_\_\_\_ at fishing." (4) \_\_\_\_\_ a while, however, Millie managed to persuade her brothers to take her (5) \_\_\_\_\_. When they reached the fishing pond, the two brothers wandered off by themselves.

**SubQuestion No : 45**

**Q.45 Select the correct option to fill blank 5.**

- Ans  1. among them  
 2. within  
 3. along  
 4. with them

Question ID : 630680515016  
Option 1 ID : 6306802012626  
Option 2 ID : 6306802012627  
Option 3 ID : 6306802012625  
Option 4 ID : 6306802012628  
Status : Answered  
Chosen Option : 1

**Comprehension:**

Read the given passage and answer the questions that follow.

New media is a catch-all term used for various kinds of electronic communications that are conceivable due to innovation in computer technology. In contrast to 'old' media, which includes newspapers, magazines, books, television and other such non-interactive media, new media comprises websites, online video/audio streams, emails, online social platforms, online communities, online forums, blogs, internet telephony, web advertisements, online education and much more. It is not very easy to draw a line between the new and old media because the so-called old media has found new ways of representation in digital forms, leaving behind its conventional methods of representation. New media is considered to be the multimedia and digital form of communication happening via desktop and laptop computers as well as phones, tablets and other devices. New media has introduced user interaction, rather than simply consuming media. New media can be customised to users' preferences and it can be selectively linked from one form of content to another.

**SubQuestion No : 46**

**Q.46 Select the most appropriate synonym of the word 'Customise'.**

- Ans  1. Personalise  
 2. Realise  
 3. Generalise  
 4. Ritualised

Question ID : 630680320652  
Option 1 ID : 6306801247351  
Option 2 ID : 6306801247350  
Option 3 ID : 6306801247352  
Option 4 ID : 6306801247349  
Status : Not Answered  
Chosen Option : --

**Comprehension:**

Read the given passage and answer the questions that follow.

New media is a catch-all term used for various kinds of electronic communications that are conceivable due to innovation in computer technology. In contrast to 'old' media, which includes newspapers, magazines, books, television and other such non-interactive media, new media comprises websites, online video/audio streams, emails, online social platforms, online communities, online forums, blogs, internet telephony, web advertisements, online education and much more. It is not very easy to draw a line between the new and old media because the so-called old media has found new ways of representation in digital forms, leaving behind its conventional methods of representation. New media is considered to be the multimedia and digital form of communication happening via desktop and laptop computers as well as phones, tablets and other devices. New media has introduced user interaction, rather than simply consuming media. New media can be customised to users' preferences and it can be selectively linked from one form of content to another.

**SubQuestion No : 47**

**Q.47 Why is it not easy to draw a line between old media and new media?**

- Ans
- 1. Because new media can be customised to users' preferences
  - 2. Because new media is considered to be the multimedia and digital form of communication
  - 3. Because both include various kinds of medium
  - 4. Because old media has found new ways of representation in digital forms

Question ID : 630680320655

Option 1 ID : 6306801247361

Option 2 ID : 6306801247364

Option 3 ID : 6306801247362

Option 4 ID : 6306801247363

Status : Answered

Chosen Option : 3

**Comprehension:**

Read the given passage and answer the questions that follow.

New media is a catch-all term used for various kinds of electronic communications that are conceivable due to innovation in computer technology. In contrast to 'old' media, which includes newspapers, magazines, books, television and other such non-interactive media, new media comprises websites, online video/audio streams, emails, online social platforms, online communities, online forums, blogs, internet telephony, web advertisements, online education and much more. It is not very easy to draw a line between the new and old media because the so-called old media has found new ways of representation in digital forms, leaving behind its conventional methods of representation. New media is considered to be the multimedia and digital form of communication happening via desktop and laptop computers as well as phones, tablets and other devices. New media has introduced user interaction, rather than simply consuming media. New media can be customised to users' preferences and it can be selectively linked from one form of content to another.

**SubQuestion No : 48**

**Q.48 How does the passage distinguish new media from old media?**

- Ans
- 1. New media includes user interaction, whereas, through old media, we only consume information.
  - 2. New media increases screen time and could be addictive and unhealthy, unlike old media.
  - 3. New media is fast and digitally based, whereas old media has never been beyond the conventional methods of representation.
  - 4. New media caters to a larger audience and is more popular than old media.

Question ID : 630680320654

Option 1 ID : 6306801247358

Option 2 ID : 6306801247357

Option 3 ID : 6306801247359

Option 4 ID : 6306801247360

Status : Answered

Chosen Option : 3



**Comprehension:**

Read the given passage and answer the questions that follow.

New media is a catch-all term used for various kinds of electronic communications that are conceivable due to innovation in computer technology. In contrast to 'old' media, which includes newspapers, magazines, books, television and other such non-interactive media, new media comprises websites, online video/audio streams, emails, online social platforms, online communities, online forums, blogs, internet telephony, web advertisements, online education and much more. It is not very easy to draw a line between the new and old media because the so-called old media has found new ways of representation in digital forms, leaving behind its conventional methods of representation. New media is considered to be the multimedia and digital form of communication happening via desktop and laptop computers as well as phones, tablets and other devices. New media has introduced user interaction, rather than simply consuming media. New media can be customised to users' preferences and it can be selectively linked from one form of content to another.

**SubQuestion No : 49**

**Q.49** Which of the following is NOT a type/kind of new media?

- Ans  1. Web advertisements  
 2. Television  
 3. Emails  
 4. Online video streams

Question ID : 630680320651  
Option 1 ID : 6306801247346  
Option 2 ID : 6306801247348  
Option 3 ID : 6306801247347  
Option 4 ID : 6306801247345  
Status : Answered  
Chosen Option : 2

**Comprehension:**

Read the given passage and answer the questions that follow.

New media is a catch-all term used for various kinds of electronic communications that are conceivable due to innovation in computer technology. In contrast to 'old' media, which includes newspapers, magazines, books, television and other such non-interactive media, new media comprises websites, online video/audio streams, emails, online social platforms, online communities, online forums, blogs, internet telephony, web advertisements, online education and much more. It is not very easy to draw a line between the new and old media because the so-called old media has found new ways of representation in digital forms, leaving behind its conventional methods of representation. New media is considered to be the multimedia and digital form of communication happening via desktop and laptop computers as well as phones, tablets and other devices. New media has introduced user interaction, rather than simply consuming media. New media can be customised to users' preferences and it can be selectively linked from one form of content to another.

**SubQuestion No : 50**

**Q.50** What does the term 'Catch-all' mean?

- Ans  1. A category which includes all the types of media  
 2. A category that includes all the sources of information  
 3. A category that includes all the sources of entertainment  
 4. A category which includes many different things

Question ID : 630680320653  
Option 1 ID : 6306801247353  
Option 2 ID : 6306801247356  
Option 3 ID : 6306801247355  
Option 4 ID : 6306801247354  
Status : Answered  
Chosen Option : 2