

## Multi Tasking Non Technical Staff and Havaladar CBIC and CBN Examination 2023

Roll Number	
Candidate Name	
Venue Name	iON Digital Zone IDZ Powai
Exam Date	08/09/2023
Exam Time	9:00 AM - 11:00 AM
Subject	MTS Non Tech Havaladar CBIC and CBN Examination 2023 Extra Time

### Section : Numerical and Mathematical Ability

**Q.1** There are 48 students in a class. Their average weight is 48 kg. When one student leaves the class, the average weight reduces by 200 grams. What is the weight of the student who left the class?

- Ans**
- ✓ 1. 57.4 kg
  - ✗ 2. 54.7 kg
  - ✗ 3. 45.7 kg
  - ✗ 4. 47.5 kg

Question ID : 264330156547

Option 1 ID : 264330613578

Option 2 ID : 264330613576

Option 3 ID : 264330613575

Option 4 ID : 264330613577

Status : Answered

Chosen Option : 2

Q.2 Following marks are obtained by a student in five subjects.

Subjects	Marks (out of 50)
CS	49
History	41
English	49
Science	44
Social Science	47

What is the percentage of marks scored by the student?

- Ans
- 1. 92.5%
  - 2. 45%
  - 3. 93%
  - 4. 92%

Question ID : 264330156537

Option 1 ID : 264330613536

Option 2 ID : 264330613538

Option 3 ID : 264330613537

Option 4 ID : 264330613535

Status : Answered

Chosen Option : 1

Q.3 Simplify:

$$3\frac{2}{7} + 3\frac{2}{11} \times 3\frac{1}{7} \div 4\frac{1}{3}$$

- Ans
- 1.  $7\frac{54}{91}$
  - 2.  $9\frac{54}{91}$
  - 3.  $5\frac{54}{91}$
  - 4.  $3\frac{54}{91}$

Question ID : 264330155721

Option 1 ID : 264330610289

Option 2 ID : 264330610290

Option 3 ID : 264330610288

Option 4 ID : 264330610287

Status : Answered

Chosen Option : 2

**Q.4** A deposited ₹62,500 at the rate of 8% per annum compounded half yearly, then what is the compound interest at the end of two years?

- Ans**
- 1. ₹18,161.12
  - 2. ₹12,171.72
  - 3. ₹10,821.18
  - 4. ₹10,616.16

Question ID : 264330154090

Option 1 ID : 264330603825

Option 2 ID : 264330603826

Option 3 ID : 264330603823

Option 4 ID : 264330603824

Status : Answered

Chosen Option : 1

**Q.5** A man and woman working on alternate days can finish a work in 15 days if the man works on the first day. The same work is finished in 14.5 days if they work on alternate days and if the woman starts on the first day. The work will be finished by a man alone in \_\_\_\_ days.

- Ans**
- 1. 25
  - 2. 21
  - 3. 15
  - 4. 22

Question ID : 264330153816

Option 1 ID : 264330602730

Option 2 ID : 264330602728

Option 3 ID : 264330602727

Option 4 ID : 264330602729

Status : Answered

Chosen Option : 2

**Q.6** If the cost price of 12 mangoes is equal to the selling price of 16 mangoes, then the loss percentage is:

- Ans**
- 1. 25%
  - 2. 4%
  - 3. 20%
  - 4. 33%

Question ID : 264330153871

Option 1 ID : 264330602948

Option 2 ID : 264330602947

Option 3 ID : 264330602949

Option 4 ID : 264330602950

Status : Answered

Chosen Option : 4

**Q.7** A boat covers a distance of 65 km downstream in 5 hours while it takes 13 hours to cover the same distance upstream. What is the speed of the boat in still water?

- Ans**
- 1. 8 km/h
  - 2. 11 km/h
  - 3. 6 km/h
  - 4. 9 km/h

Question ID : 264330154093  
Option 1 ID : 264330603838  
Option 2 ID : 264330603836  
Option 3 ID : 264330603835  
Option 4 ID : 264330603837  
Status : Answered  
Chosen Option : 3

**Q.8** There are two varieties of rice. Variety 1 costs ₹100 per kg and variety 2 costs ₹120 per kg. The vendor mixed both the varieties and sold for ₹121 per kg and gained 10%. Find the ratio of variety 1 to variety 2 rice in the mixture.

- Ans**
- 1. 1 : 1
  - 2. 3 : 1
  - 3. 2 : 1
  - 4. 1 : 3

Question ID : 264330153837  
Option 1 ID : 264330602812  
Option 2 ID : 264330602814  
Option 3 ID : 264330602813  
Option 4 ID : 264330602811  
Status : Answered  
Chosen Option : 4

**Q.9** The average weight of A, B and C is 43 kg. If the average weight of A and B is 40 kg and that of B and C is 41 kg, then the weight (in kg) of B is?

- Ans**
- 1. 41
  - 2. 43
  - 3. 33
  - 4. 37

Question ID : 264330156509  
Option 1 ID : 264330613425  
Option 2 ID : 264330613426  
Option 3 ID : 264330613423  
Option 4 ID : 264330613424  
Status : Answered  
Chosen Option : 1

**Q.10** Vinita obtained an amount of ₹23,340 as simple interest on a certain amount at 15% per annum after 8 years. What was the amount invested by Vinita?

- Ans**
- 1. ₹20,450
  - 2. ₹18,650
  - 3. ₹17,490
  - 4. ₹19,450

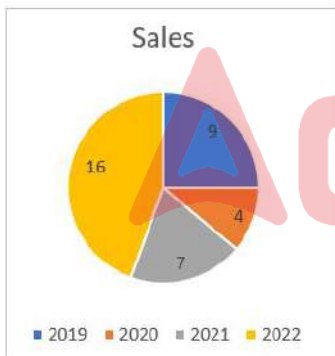
Question ID : 264330156187  
Option 1 ID : 264330612150  
Option 2 ID : 264330612148  
Option 3 ID : 264330612147  
Option 4 ID : 264330612149  
Status : Answered  
Chosen Option : 4

**Q.11** The largest three-digit number which gives the same remainder 2 when divided by 3, 5 and 9 is \_\_\_\_\_.

- Ans**
- 1. 980
  - 2. 992
  - 3. 995
  - 4. 990

Question ID : 264330156249  
Option 1 ID : 264330612398  
Option 2 ID : 264330612395  
Option 3 ID : 264330612397  
Option 4 ID : 264330612396  
Status : Answered  
Chosen Option : 2

**Q.12** Consider the sales of a company in the year 2019, 2020, 2021 and 2022 given in the pie chart.



The difference in angles at the centre by sales in 2022 and 2019 is \_\_\_\_\_ degrees.

- Ans**
- 1. 50
  - 2. 80
  - 3. 60
  - 4. 70

Question ID : 264330153822  
Option 1 ID : 264330602751  
Option 2 ID : 264330602754  
Option 3 ID : 264330602752  
Option 4 ID : 264330602753  
Status : Answered  
Chosen Option : 2

**Q.13** A can complete a piece of work in 20 days. B can complete the same work in 36 days. If A and B work together, then the number of days required to complete the work is:

- Ans**
- 1.  $10\frac{6}{7}$
  - 2.  $12\frac{6}{7}$
  - 3.  $12\frac{1}{7}$
  - 4.  $10\frac{1}{7}$

Question ID : 264330156492  
Option 1 ID : 264330613355  
Option 2 ID : 264330613358  
Option 3 ID : 264330613356  
Option 4 ID : 264330613357  
Status : Answered  
Chosen Option : 3

**Q.14** What is the fourth proportional to 816, 226, 408?

- Ans**
- 1. 108
  - 2. 103
  - 3. 113
  - 4. 117

Question ID : 264330154086  
Option 1 ID : 264330603807  
Option 2 ID : 264330603809  
Option 3 ID : 264330603810  
Option 4 ID : 264330603808  
Status : Answered  
Chosen Option : 1

**Q.15** If the price of a product is decreased by 50%, then increased by 50% and then again increased by 50%, what is the net increase percentage in the price?

- Ans**
- 1. 13.5%
  - 2. 11.5%
  - 3. 12.5%
  - 4. 9.5%

Question ID : 264330156516  
Option 1 ID : 264330613453  
Option 2 ID : 264330613451  
Option 3 ID : 264330613454  
Option 4 ID : 264330613452  
Status : Answered  
Chosen Option : 3

**Q.16** The marks scored by a student are directly proportional to the time invested in studies. If the student gets 60 marks when he studies 4 hours a day, then how many hours he should use in his studies daily to get 75 marks?

- Ans
- 1. 4.5
  - 2. 5
  - 3. 5.5
  - 4. 6

Question ID : 264330153810  
Option 1 ID : 264330602703  
Option 2 ID : 264330602705  
Option 3 ID : 264330602704  
Option 4 ID : 264330602706  
Status : Answered  
Chosen Option : 2

**Q.17** The distance covered (in km) by a bus in 55 minutes at a speed of 69 km/h is:

- Ans
- 1. 67.75
  - 2. 63.25
  - 3. 65.25
  - 4. 60.75

Question ID : 264330156488  
Option 1 ID : 264330613341  
Option 2 ID : 264330613342  
Option 3 ID : 264330613339  
Option 4 ID : 264330613340  
Status : Answered  
Chosen Option : 1

**Q.18** The cost price of an item is ₹4,850. What is the profit percentage (rounded off to 1 decimal place) if it is sold at ₹6,680?

- Ans
- 1. 44.6%
  - 2. 37.7%
  - 3. 39.5%
  - 4. 35.5%

Question ID : 264330163010  
Option 1 ID : 264330639356  
Option 2 ID : 264330639358  
Option 3 ID : 264330639357  
Option 4 ID : 264330639355  
Status : Answered  
Chosen Option : 2

**Q.19** The radius of a cone is 10.5 cm and the area of the curved surface is  $396 \text{ cm}^2$ . Find its slant height.

Take  $\pi = \frac{22}{7}$

- Ans**
- 1. 9 cm
  - 2. 11.5 cm
  - 3. 12 cm
  - 4. 8.5 cm

Question ID : 264330156371  
Option 1 ID : 264330612884  
Option 2 ID : 264330612885  
Option 3 ID : 264330612886  
Option 4 ID : 264330612883  
Status : Answered  
Chosen Option : 2

**Q.20** Find the volume of a cuboid whose dimensions are 12.2 cm, 16 cm and 8.5 cm.

- Ans**
- 1.  $3072 \text{ cm}^3$
  - 2.  $1659.2 \text{ cm}^3$
  - 3.  $832 \text{ cm}^3$
  - 4.  $1664 \text{ cm}^3$

Question ID : 264330156087  
Option 1 ID : 264330611749  
Option 2 ID : 264330611748  
Option 3 ID : 264330611747  
Option 4 ID : 264330611750  
Status : Answered  
Chosen Option : 4

Section : Reasoning Ability and Problem Solving

**Q.1** What should come in place of ? in the given series based on the English alphabetical order?

ICU, FAT, CYS, ZWR, ?

- Ans**
- 1. VTR
  - 2. VST
  - 3. WVS
  - 4. WUQ

Question ID : 264330155778  
Option 1 ID : 264330610517  
Option 2 ID : 264330610516  
Option 3 ID : 264330610515  
Option 4 ID : 264330610518  
Status : Answered  
Chosen Option : 4



**Q.2** In a certain code language, 'YOU' is coded as '20' and 'LIP' is coded as '44'. What is the code for 'ROB' in the given code language?

- Ans**
- 1. 44
  - 2. 46
  - 3. 41
  - 4. 42

Question ID : 264330155820

Option 1 ID : 264330610683

Option 2 ID : 264330610684

Option 3 ID : 264330610686

Option 4 ID : 264330610685

Status : Answered

Chosen Option : 2

**Q.3** In the following number-pairs, the second number is obtained by applying certain mathematical operations to the first number. Select the set in which the numbers are related in the same way as are the numbers of the following sets.

(NOTE: Operations should be performed on the whole numbers, without breaking down the numbers into its constituent digits. E.g. 13 – Operations on 13 such as adding / subtracting / multiplying etc. to 13 can be performed. Breaking down 13 into 1 and 3 and then performing mathematical operations on 1 and 3 is not allowed)

7, 13

18, 35

- Ans**
- 1. 77, 98
  - 2. 22, 43
  - 3. 32, 64
  - 4. 44, 76

Question ID : 264330151624

Option 1 ID : 264330594126

Option 2 ID : 264330594123

Option 3 ID : 264330594124

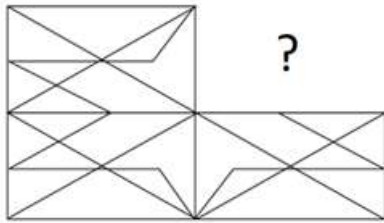
Option 4 ID : 264330594125

Status : Answered

Chosen Option : 2

Adda247

Q.4 Identify the figure that completes the pattern (rotation is NOT allowed).



Ans

✓ 1.



✗ 2.



✗ 3.



✗ 4.



Question ID : 264330154519

Option 1 ID : 264330605541

Option 2 ID : 264330605540

Option 3 ID : 264330605539

Option 4 ID : 264330605542

Status : Answered

Chosen Option : 1

Q.5 What should come in place of ? in the given series based on the English alphabetical order?

TEO, RCM, PAK, NYI, ?

Ans

✗ 1. KVH

✗ 2. KUH

✗ 3. LVG

✓ 4. LWG

Question ID : 264330155769

Option 1 ID : 264330610481

Option 2 ID : 264330610480

Option 3 ID : 264330610479

Option 4 ID : 264330610482

Status : Answered

Chosen Option : 4

**Q.6** Which figure should replace the question mark (?) if the following figure series were to be continued?

K	R	4	2	
R S A	Q 4 S	2 K A	R S K	?
Q	4 K A	R S	4 A	

Ans

✗ 1.

A		
G	R	S
2		4

✗ 2.

4		
G	2	A
S		K

✓ 3.

S		
G	4	A
2		K

✗ 4.

4		
G	A	S
2		K

Question ID : 264330154759

Option 1 ID : 264330606500

Option 2 ID : 264330606501

Option 3 ID : 264330606499

Option 4 ID : 264330606502

Status : Answered

Chosen Option : 4

**Q.7** If G means '-'; C means '\*'; D means '+'; B means '+', then what will come in place of the question mark (?) in the following equation?

$$13 C 8 G 45 B 22 D 2 = ?$$

Ans ✗ 1. 78

✗ 2. 62

✓ 3. 70

✗ 4. 55

Question ID : 264330154682

Option 1 ID : 264330606194

Option 2 ID : 264330606192

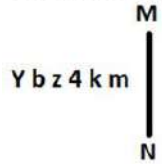
Option 3 ID : 264330606193

Option 4 ID : 264330606191

Status : Answered

Chosen Option : 3

Q.8 Select the correct mirror image of the given figure when the mirror is placed at MN as shown below.



- Ans
- 1. m k P z q A
  - 2. m k P z b Y
  - 3. w k 4 z d Y
  - 4. m k P z d Y

Question ID : 264330151513

Option 1 ID : 264330593682

Option 2 ID : 264330593681

Option 3 ID : 264330593679

Option 4 ID : 264330593680

Status : Answered

Chosen Option : 4

Q.9 Select the word-pair that best represents a similar relationship to the one expressed in the pair of words given below.

(The words must be considered as meaningful English words and must not be related to each other based on the number of letters/number of consonants/vowels in the word)

Cricket : Pitch

- Ans
- 1. Wrestling : Track
  - 2. Ship : Dock
  - 3. Boxing : Ring
  - 4. Boat : Harbour

Question ID : 264330154633

Option 1 ID : 264330605998

Option 2 ID : 264330605995

Option 3 ID : 264330605997

Option 4 ID : 264330605996

Status : Answered

Chosen Option : 3

Q.10 The position of how many letters will remain unchanged if each of the letter in the word 'POCKET' is arranged in alphabetical order?

- Ans
- 1. Two
  - 2. Five
  - 3. Three
  - 4. One

Question ID : 264330154322

Option 1 ID : 264330604752

Option 2 ID : 264330604754

Option 3 ID : 264330604753

Option 4 ID : 264330604751

Status : Answered

Chosen Option : 2

Q.11 What should come in place of ? in the given series?

73 75 77 79 81 ?

- Ans
- 1. 82
  - 2. 83
  - 3. 85
  - 4. 84

Question ID : 264330151540  
Option 1 ID : 264330593787  
Option 2 ID : 264330593788  
Option 3 ID : 264330593790  
Option 4 ID : 264330593789  
Status : Answered  
Chosen Option : 2

Q.12 Seven people, U, M, K, G, B, R and D are sitting in a straight line, facing south. Only two people sit to the left of B. M sits third to the right of G. U is the immediate neighbour of M and B. D sits to the immediate left of K.

Total how many people sit between D and G?

- Ans
- 1. Two
  - 2. Three
  - 3. One
  - 4. Four

Question ID : 264330161695  
Option 1 ID : 264330634108  
Option 2 ID : 264330634109  
Option 3 ID : 264330634107  
Option 4 ID : 264330634110  
Status : Answered  
Chosen Option : 2

Q.13 What should come in place of ? in the given series based on the English alphabetical order?

GUN, DWM, AYL, XAK, ?

- Ans
- 1. VCI
  - 2. VBH
  - 3. UCJ
  - 4. UBI

Question ID : 264330155805  
Option 1 ID : 264330610625  
Option 2 ID : 264330610623  
Option 3 ID : 264330610624  
Option 4 ID : 264330610626  
Status : Answered  
Chosen Option : 3

**Q.14** In a certain code language, 'ATOM' is coded as '9613' and 'BOAT' is coded as '1938'. What is the code for 'B' in the given code language?

- Ans
- 1. 9
  - 2. 8
  - 3. 3
  - 4. 1

Question ID : 264330151705

Option 1 ID : 264330594449

Option 2 ID : 264330594448

Option 3 ID : 264330594447

Option 4 ID : 264330594450

Status : Answered

Chosen Option : 2

**Q.15** Read the given statements and conclusions carefully. You have to take the given statements to be true even if they seem to be at variance from commonly known facts. You have to decide which conclusion/s logically follow/s from the given statements.

Statements: All people are tall. Some tall are buildings. No buildings are clocks.

Conclusion I: Some people are buildings.

Conclusion II: No clocks are buildings.

- Ans
- 1. Only conclusion (II) is follow.
  - 2. Neither conclusion (I) nor (II) is follow.
  - 3. Both conclusions (I) and (II) are follow.
  - 4. Only conclusion (I) is follow.

Question ID : 264330155920

Option 1 ID : 264330611084

Option 2 ID : 264330611085

Option 3 ID : 264330611086

Option 4 ID : 264330611083

Status : Answered

Chosen Option : 1

**Q.16** If 'I' stands for '+', 'J' stands for '×', 'K' stands for '÷' and 'L' stands for '^', what will come in place of the question mark (?) in the following equation?  
 $119 I (7 J 3) L (50 K 5) L 45 = ?$

- Ans
- 1. 85
  - 2. 80
  - 3. 75
  - 4. 70

Question ID : 264330151804

Option 1 ID : 264330594844

Option 2 ID : 264330594843

Option 3 ID : 264330594846

Option 4 ID : 264330594845

Status : Answered

Chosen Option : 3

**Q.17** In the following number-pairs, the second number is obtained by applying certain mathematical operations to the first number. Select the set in which the numbers are related in the same way as are the numbers of the following sets.  
53, 90  
79, 116  
(NOTE: Operations should be performed on the whole numbers, without breaking down the numbers into its constituent digits. E.g. 13 – Operations on 13 such as adding / subtracting / multiplying etc. to 13 can be performed. Breaking down 13 into 1 and 3 and then performing mathematical operations on 1 and 3 is not allowed)

- Ans**
- ✓ 1. 47, 84
  - ✗ 2. 31, 94
  - ✗ 3. 59, 98
  - ✗ 4. 42, 59

Question ID : 264330154501  
Option 1 ID : 264330605470  
Option 2 ID : 264330605467  
Option 3 ID : 264330605469  
Option 4 ID : 264330605468  
Status : Answered  
Chosen Option : 1

**Q.18** What should come in place of '?' in the given series?

11 32 74 158 326 ?

- Ans**
- ✓ 1. 662
  - ✗ 2. 674
  - ✗ 3. 625
  - ✗ 4. 648

Question ID : 264330151474  
Option 1 ID : 264330593525  
Option 2 ID : 264330593526  
Option 3 ID : 264330593523  
Option 4 ID : 264330593524  
Status : Answered  
Chosen Option : 1

**Q.19** Read the given statements and conclusions carefully. You have to take the given statements to be true even if they seem to be at variance from commonly known facts. You have to decide which conclusion/s logically follow/s from the given statements.

Statements: Some combs are wood. Some wood are tables. Some tables are plastic.

Conclusion I: Some wood are combs.

Conclusion II: All plastic are tables.

- Ans**
- ✗ 1. Only conclusion (II) is follow.
  - ✗ 2. Both conclusions (I) and (II) are follow.
  - ✓ 3. Only conclusion (I) is follow.
  - ✗ 4. Neither conclusion (I) nor (II) is follow.

Question ID : 264330155901  
Option 1 ID : 264330611008  
Option 2 ID : 264330611010  
Option 3 ID : 264330611007  
Option 4 ID : 264330611009  
Status : Answered  
Chosen Option : 3

Q.20 What should come in place of ? in the given series?

23 28 38 53 73 ?

- Ans
- 1. 95
  - 2. 91
  - 3. 101
  - 4. 98

Question ID : 264330151713  
Option 1 ID : 264330594480  
Option 2 ID : 264330594482  
Option 3 ID : 264330594479  
Option 4 ID : 264330594481  
Status : Answered  
Chosen Option : 4

Section : General Awareness

Q.1 Which Indian Mass Movement began with the famous 'Dandi March' of Mahatma Gandhi?

- Ans
- 1. Civil Disobedience Movement
  - 2. Non-Cooperation Movement
  - 3. Quit India Movement
  - 4. Kheda Movement

Question ID : 264330162326  
Option 1 ID : 264330636633  
Option 2 ID : 264330636632  
Option 3 ID : 264330636631  
Option 4 ID : 264330636634  
Status : Answered  
Chosen Option : 1

Q.2 Whose autobiography is titled 'An Unsuitable Boy'?

- Ans
- 1. Karan Johar
  - 2. Aditya Chopra
  - 3. Hansal Mehta
  - 4. Sanjay Kapoor

Question ID : 264330155448  
Option 1 ID : 264330609197  
Option 2 ID : 264330609195  
Option 3 ID : 264330609196  
Option 4 ID : 264330609198  
Status : Not Answered  
Chosen Option : --



Q.3 The length of the men's kabaddi court is \_\_\_\_\_ metres.

- Ans  1. 10  
 2. 13  
 3. 17  
 4. 15

Question ID : 264330158245  
Option 1 ID : 264330620339  
Option 2 ID : 264330620340  
Option 3 ID : 264330620342  
Option 4 ID : 264330620341  
Status : Not Answered  
Chosen Option : --

Q.4 Who among the following is the author of the book 'The Zoya factor'?

- Ans  1. Kiran Desai  
 2. Sudha Murty  
 3. Anuja Chauhan  
 4. Nandini Bajpai

Question ID : 264330155458  
Option 1 ID : 264330609235  
Option 2 ID : 264330609236  
Option 3 ID : 264330609238  
Option 4 ID : 264330609237  
Status : Answered  
Chosen Option : 2

Q.5 Who among the following has NOT received the Sangeet Natak Akademi Award-2021 (given in February 2023) for his/her contribution in dance ?

- Ans  1. Neena Prasad  
 2. Sumitra Guha  
 3. Jayalakshmi Eshwar  
 4. Thokchom Ibemubi Devi

Question ID : 264330157837  
Option 1 ID : 264330618708  
Option 2 ID : 264330618710  
Option 3 ID : 264330618707  
Option 4 ID : 264330618709  
Status : Not Answered  
Chosen Option : --

**Q.6 Which of the following is NOT a Directive Principle based on the ideals of Mahatma Gandhi?**

- Ans**
- 1. To promote industrialisation in urban areas
  - 2. To organise village Panchayats
  - 3. To prohibit intoxicating drinks and drugs that are injurious to health
  - 4. To promote cottage industries in rural areas

Question ID : 264330162251  
Option 1 ID : 264330636334  
Option 2 ID : 264330636331  
Option 3 ID : 264330636333  
Option 4 ID : 264330636332  
Status : Answered  
Chosen Option : 3

**Q.7 Which of the following methods is used to calculate national income by summing up the total incomes earned by individuals and businesses in an economy?**

- Ans**
- 1. Value-added method
  - 2. Output method
  - 3. Income method
  - 4. Expenditure method

Question ID : 264330157315  
Option 1 ID : 264330616626  
Option 2 ID : 264330616625  
Option 3 ID : 264330616623  
Option 4 ID : 264330616624  
Status : Answered  
Chosen Option : 2

**Q.8 What is personal income?**

- Ans**
- 1. The income earned by individuals and households after taxes and other deductions
  - 2. The total income earned by businesses and corporations in an economy
  - 3. The income earned by individuals through their own business or self-employment
  - 4. The total income earned by individuals and households before taxes and other deductions

Question ID : 264330157318  
Option 1 ID : 264330616637  
Option 2 ID : 264330616635  
Option 3 ID : 264330616638  
Option 4 ID : 264330616636  
Status : Answered  
Chosen Option : 1

**Q.9 Who founded the Hindu reform organisation Brahma Samaj?**

- Ans**
- 1. Ramkrishna Paramhans
  - 2. Rabindranath Tagore
  - 3. Atmaram Pandurang
  - 4. Raja Ram Mohan Roy

Question ID : 264330161745  
Option 1 ID : 264330634307  
Option 2 ID : 264330634309  
Option 3 ID : 264330634310  
Option 4 ID : 264330634308  
Status : Answered  
Chosen Option : 4

Q.10 Whom among the following Indian singers is known as 'Gazal King'?

- Ans  1. Manna Dey  
 2. Mukesh  
 3. Shailendra  
 4. Jagjit Singh

Question ID : 264330162232  
Option 1 ID : 264330636256  
Option 2 ID : 264330636255  
Option 3 ID : 264330636257  
Option 4 ID : 264330636258  
Status : Answered  
Chosen Option : 3

Q.11 Dree Utsav is celebrated in the state of \_\_\_\_\_.

- Ans  1. Arunachal Pradesh  
 2. Kerala  
 3. Assam  
 4. Andhra Pradesh

Question ID : 264330159082  
Option 1 ID : 264330623689  
Option 2 ID : 264330623690  
Option 3 ID : 264330623688  
Option 4 ID : 264330623687  
Status : Answered  
Chosen Option : 1

Q.12 \_\_\_\_\_ word of Indian dance is derived from a Sanskrit word and literally means 'taking towards'.

- Ans  1. Nritya  
 2. Laasya  
 3. Taandava  
 4. Abhinaya

Question ID : 264330159047  
Option 1 ID : 264330623549  
Option 2 ID : 264330623547  
Option 3 ID : 264330623550  
Option 4 ID : 264330623548  
Status : Answered  
Chosen Option : 1

Q.13 Which of the following is an example of the Western Coast Port?

- Ans  1. Tuticorin Port  
 2. Paradip Port  
 3. Mumbai Port  
 4. Vishakhapatnam Port

Question ID : 264330160139  
Option 1 ID : 264330627897  
Option 2 ID : 264330627896  
Option 3 ID : 264330627898  
Option 4 ID : 264330627895  
Status : Answered  
Chosen Option : 3

**Q.14 What are the three tiers of the Government in India?**

- Ans
- 1. Union government, Judiciary government and Federal government
  - 2. Union government, State Government and Federal Government
  - 3. Union government, State government and Judiciary government
  - 4. Union Government, State Government and Local Government

Question ID : 264330161290  
Option 1 ID : 264330632488  
Option 2 ID : 264330632490  
Option 3 ID : 264330632487  
Option 4 ID : 264330632489  
Status : Answered  
Chosen Option : 4

**Q.15 The foundation of Sanchi Stupa was laid by which of the following Kings?**

- Ans
- 1. Samudragupta
  - 2. Bimbisara
  - 3. Ashoka
  - 4. Chandragupta Maurya

Question ID : 264330160758  
Option 1 ID : 264330630365  
Option 2 ID : 264330630363  
Option 3 ID : 264330630366  
Option 4 ID : 264330630364  
Status : Answered  
Chosen Option : 3

**Q.16 During which months do retreating monsoons occur in India?**

- Ans
- 1. January and February
  - 2. May and June
  - 3. October and November
  - 4. March and April

Question ID : 264330160147  
Option 1 ID : 264330627930  
Option 2 ID : 264330627928  
Option 3 ID : 264330627927  
Option 4 ID : 264330627929  
Status : Answered  
Chosen Option : 3

**Q.17 Which is the primary structural component responsible for most of the mechanical strength of the cell wall?**

- Ans
- 1. Heparin
  - 2. Glycogen
  - 3. Chitin
  - 4. Cellulose

Question ID : 264330161082  
Option 1 ID : 264330631662  
Option 2 ID : 264330631660  
Option 3 ID : 264330631661  
Option 4 ID : 264330631659  
Status : Answered  
Chosen Option : 4

Q.18 Ball and spring model of chemical bonds obey:

- Ans  1. Hooke's law  
 2. Charles' law  
 3. gravitational law  
 4. Newton's law

Question ID : 264330156586  
Option 1 ID : 264330613734  
Option 2 ID : 264330613732  
Option 3 ID : 264330613731  
Option 4 ID : 264330613733  
Status : Answered  
Chosen Option : 2

Q.19 Pandit Janki Prasad was associated with which of the following Gharanas of Kathak?

- Ans  1. Banaras  
 2. Raigarh  
 3. Jaipur  
 4. Lucknow

Question ID : 264330160809  
Option 1 ID : 264330630569  
Option 2 ID : 264330630570  
Option 3 ID : 264330630567  
Option 4 ID : 264330630568  
Status : Answered  
Chosen Option : 4

Q.20 In 2023, Ajay Singh, the chief of SpiceJet was appointed as president of which of the following?

- Ans  1. FICCI  
 2. ASSOCHAM  
 3. CII  
 4. NASSCOM

Question ID : 264330158348  
Option 1 ID : 264330620751  
Option 2 ID : 264330620752  
Option 3 ID : 264330620753  
Option 4 ID : 264330620754  
Status : Answered  
Chosen Option : 1

Q.21 Rohit Sharma became the first ever Indian to play how many T20 cricket matches in October 2022?

- Ans  1. 300  
 2. 100  
 3. 200  
 4. 400

Question ID : 264330158361  
Option 1 ID : 264330620805  
Option 2 ID : 264330620803  
Option 3 ID : 264330620804  
Option 4 ID : 264330620806  
Status : Answered  
Chosen Option : 1

Q.22 Which form of Indian dance is said to be 'soft and suitable for female presentation'?

- Ans
- 1. Nritya
  - 2. Taandava
  - 3. Laasya
  - 4. Nritya

Question ID : 264330161891  
Option 1 ID : 264330634892  
Option 2 ID : 264330634893  
Option 3 ID : 264330634894  
Option 4 ID : 264330634891  
Status : Answered  
Chosen Option : 3

Q.23 Which of the following oceans is surrounded by the continent of North America and South America to the east?

- Ans
- 1. Pacific Ocean
  - 2. Atlantic Ocean
  - 3. Indian Ocean
  - 4. Arctic Ocean

Question ID : 264330161323  
Option 1 ID : 264330632620  
Option 2 ID : 264330632622  
Option 3 ID : 264330632619  
Option 4 ID : 264330632621  
Status : Answered  
Chosen Option : 2

Q.24 The famous 'Pashupatinath Temple' is located in which country from the following?

- Ans
- 1. Nepal
  - 2. Bhutan
  - 3. Maldives
  - 4. Sri Lanka

Question ID : 264330161561  
Option 1 ID : 264330633574  
Option 2 ID : 264330633571  
Option 3 ID : 264330633573  
Option 4 ID : 264330633572  
Status : Answered  
Chosen Option : 1

Q.25 In which of the following years was the first Janjatiya Khel Mahotsav held?

- Ans
- 1. 2023
  - 2. 2021
  - 3. 2020
  - 4. 2022

Question ID : 264330161142  
Option 1 ID : 264330631900  
Option 2 ID : 264330631901  
Option 3 ID : 264330631902  
Option 4 ID : 264330631899  
Status : Answered  
Chosen Option : 1

**Q.1** Select the option that can be used as a one-word substitute for the given group of words.

One who does not believe in the existence of God

- Ans
- 1. Atheist
  - 2. Priest
  - 3. Monk
  - 4. Believer

Question ID : 264330153404

Option 1 ID : 264330601152

Option 2 ID : 264330601153

Option 3 ID : 264330601151

Option 4 ID : 264330601154

Status : Answered

Chosen Option : 1

**Q.2** Select the most appropriate option that can rectify the underlined segment in the given sentence. If there is no need to rectify it, select 'no rectification needed'.

You are the beautiful woman I have ever seen.

- Ans
- 1. no rectification needed
  - 2. more beautiful
  - 3. beauty
  - 4. most beautiful

Question ID : 264330153465

Option 1 ID : 264330601378

Option 2 ID : 264330601377

Option 3 ID : 264330601375

Option 4 ID : 264330601376

Status : Answered

Chosen Option : 4

**Q.3** Choose the option which best expresses the meaning of the given idiom.

By fair means or foul

- Ans
- 1. To work without planning
  - 2. To find difficulty in completing some work
  - 3. To get one's way with honesty or dishonesty
  - 4. To provoke someone into quarrelling

Question ID : 264330153347

Option 1 ID : 264330600939

Option 2 ID : 264330600941

Option 3 ID : 264330600940

Option 4 ID : 264330600942

Status : Answered

Chosen Option : 3

**Q.4** The following sentence has been split into four segments. Identify the segment that contains a grammatical error.

My younger daughter, / Kanu prefer / dark chocolate / to yoghurt.

- Ans
- 1. dark chocolate
  - 2. My younger daughter
  - 3. Kanu prefer
  - 4. to yoghurt

Question ID : 264330147603  
Option 1 ID : 264330578633  
Option 2 ID : 264330578631  
Option 3 ID : 264330578632  
Option 4 ID : 264330578634  
Status : Answered  
Chosen Option : 2

**Q.5** Choose the sentence that contains an error.

- Ans
- 1. I saw a movie that was directed by Steven Spielberg.
  - 2. She is the only person who can solve this difficult math problem.
  - 3. He is an lawyer who works for a prestigious law firm.
  - 4. The Great Wall of China is a popular tourist attraction.

Question ID : 264330155179  
Option 1 ID : 264330608176  
Option 2 ID : 264330608177  
Option 3 ID : 264330608178  
Option 4 ID : 264330608175  
Status : Answered  
Chosen Option : 2

**Q.6** Parts of the following sentence have been given as options. Select the option that contains an error.

Ishita will playing Tennis for her favourite team.

- Ans
- 1. will playing
  - 2. Tennis for
  - 3. her favourite team
  - 4. Ishita

Question ID : 264330152816  
Option 1 ID : 264330598856  
Option 2 ID : 264330598857  
Option 3 ID : 264330598858  
Option 4 ID : 264330598855  
Status : Answered  
Chosen Option : 1



**Q.7** Select the most appropriate option that can substitute the underlined segment in the given sentence.

He apologised in her silently before he pushed deeper into her thoughts.

- Ans**
- 1. apologise in her
  - 2. apologised with her
  - 3. apologised of her
  - 4. apologised to her

Question ID : 264330153476  
Option 1 ID : 264330601421  
Option 2 ID : 264330601420  
Option 3 ID : 264330601419  
Option 4 ID : 264330601422  
Status : Answered  
Chosen Option : 4

**Q.8** Select the correctly spelt word.

- Ans**
- 1. Bihavior
  - 2. Behavior
  - 3. Behaviour
  - 4. Behaveor

Question ID : 264330153412  
Option 1 ID : 264330601183  
Option 2 ID : 264330601186  
Option 3 ID : 264330601185  
Option 4 ID : 264330601184  
Status : Answered  
Chosen Option : 3

**Q.9** Select the most appropriate synonym of the given word.  
Obvious

- Ans**
- 1. Clear
  - 2. Murky
  - 3. Ambiguous
  - 4. Opaque

Question ID : 264330151825  
Option 1 ID : 264330594930  
Option 2 ID : 264330594928  
Option 3 ID : 264330594929  
Option 4 ID : 264330594927  
Status : Answered  
Chosen Option : 1

**Q.10** Select the most appropriate meaning of the given idiom.  
As phony as a three-dollar bill

- Ans
- 1. Something that is attractive
  - 2. Something that is genuine
  - 3. Something that is disgusting
  - 4. Something that is fake

Question ID : 264330153439  
Option 1 ID : 264330601280  
Option 2 ID : 264330601279  
Option 3 ID : 264330601282  
Option 4 ID : 264330601281  
Status : Answered  
Chosen Option : 1

**Q.11** Select the most appropriate option to fill in the blank.

They are going to give me a lovely present, but I cannot \_\_\_\_ what it will be.

- Ans
- 1. give
  - 2. gist
  - 3. guess
  - 4. guest

Question ID : 264330153496  
Option 1 ID : 264330601502  
Option 2 ID : 264330601501  
Option 3 ID : 264330601500  
Option 4 ID : 264330601499  
Status : Answered  
Chosen Option : 3

**Q.12** Select the INCORRECTLY spelt word.

- Ans
- 1. Important
  - 2. Maintanance
  - 3. Friend
  - 4. Rhythm

Question ID : 264330152643  
Option 1 ID : 264330598177  
Option 2 ID : 264330598176  
Option 3 ID : 264330598178  
Option 4 ID : 264330598175  
Status : Answered  
Chosen Option : 2

**Q.13** Select the most appropriate synonym of the given word.  
**Determined**

- Ans  1. Flexible  
 2. Famous  
 3. Decisive  
 4. Elevated

Question ID : 264330151919  
Option 1 ID : 264330595291  
Option 2 ID : 264330595293  
Option 3 ID : 264330595294  
Option 4 ID : 264330595292  
Status : Not Answered  
Chosen Option : --

**Q.14** Select the most appropriate synonym of the underlined word.  
Ray was cynical about love.

- Ans  1. prolific  
 2. obese  
 3. trusting  
 4. pessimistic

Question ID : 264330153520  
Option 1 ID : 264330601594  
Option 2 ID : 264330601593  
Option 3 ID : 264330601592  
Option 4 ID : 264330601591  
Status : Answered  
Chosen Option : 4

**Q.15** Select the option that rectifies the spelling of the underlined word in the given sentence.

The company sent out a questionaire to its employees to gather feedback on their work environment.

- Ans  1. questioneire  
 2. questionnaire  
 3. questionnre  
 4. questionaiare

Question ID : 264330153229  
Option 1 ID : 264330600478  
Option 2 ID : 264330600476  
Option 3 ID : 264330600475  
Option 4 ID : 264330600477  
Status : Answered  
Chosen Option : 2

**Q.16** Select the option that can be used as a one-word substitute for the given group of words.

A person who feeds on human flesh

- Ans  1. Cannibal  
 2. Carnivore  
 3. Nudge  
 4. Omnivore

Question ID : 264330153405

Option 1 ID : 264330601157

Option 2 ID : 264330601155

Option 3 ID : 264330601156

Option 4 ID : 264330601158

Status : Answered

Chosen Option : 2

**Q.17** Select the most appropriate option that can substitute the underlined segment in the given sentence. If there is no need to substitute it, select 'No substitution required'.  
Larger emissions of greenhouse gases lead to higher concentrations in the atmosphere.

- Ans  1. leaded to higher concentrations  
 2. have lead to higher concentrations  
 3. is lead to higher concentrations  
 4. No substitution required

Question ID : 264330151898

Option 1 ID : 264330595207

Option 2 ID : 264330595208

Option 3 ID : 264330595209

Option 4 ID : 264330595210

Status : Answered

Chosen Option : 4

**Q.18** Select the most appropriate meaning of the underlined idiom.  
Ramesh always blows his own trumpet.

- Ans  1. praises himself  
 2. criticises himself  
 3. does his own work  
 4. depends on others

Question ID : 264330152752

Option 1 ID : 264330598607

Option 2 ID : 264330598608

Option 3 ID : 264330598609

Option 4 ID : 264330598610

Status : Answered

Chosen Option : 1

**Q.19** Select the most appropriate meaning of the underlined idiom.  
He was on cloud nine when he got admission in Cambridge University.

- Ans  1. involved in useless journey  
 2. very happy  
 3. unsettled  
 4. available to be called to go to work

Question ID : 264330153642  
Option 1 ID : 264330602042  
Option 2 ID : 264330602039  
Option 3 ID : 264330602041  
Option 4 ID : 264330602040  
Status : Answered  
Chosen Option : 2

**Q.20** Select the option that can be used as a one-word substitute for the given group of words.

An examination of a body after death

- Ans  1. Post room  
 2. Post death  
 3. Post partum  
 4. Post mortem

Question ID : 264330152588  
Option 1 ID : 264330597958  
Option 2 ID : 264330597956  
Option 3 ID : 264330597955  
Option 4 ID : 264330597957  
Status : Answered  
Chosen Option : 4

**Comprehension:**

In the following passage some words have been deleted. Fill in the blanks with the help of the alternatives given. Select the most appropriate option for each number.

One of the (1)\_\_\_\_\_ tragedies is seeing someone with incredible talent get (2)\_\_\_\_\_ because he or she lacks some basic skills. This book (3)\_\_\_\_\_ the number one reason executives derail, and it provides extremely helpful tools to operate in a fast-paced, result-oriented environment. I am impressed by how insightful, (4)\_\_\_\_\_, well organised and focused it is. It will surely help one (5)\_\_\_\_\_ several difficult situations.

SubQuestion No : 21

**Q.21** Select the most appropriate option to fill in blank number 1.

- Ans  1. more great  
 2. great  
 3. greater  
 4. greatest

Question ID : 264330153590  
Option 1 ID : 264330601850  
Option 2 ID : 264330601847  
Option 3 ID : 264330601848  
Option 4 ID : 264330601849  
Status : Answered  
Chosen Option : 4

**Comprehension:**

In the following passage some words have been deleted. Fill in the blanks with the help of the alternatives given. Select the most appropriate option for each number.

One of the (1)\_\_\_\_\_ tragedies is seeing someone with incredible talent get (2)\_\_\_\_\_ because he or she lacks some basic skills. This book (3)\_\_\_\_\_ the number one reason executives derail, and it provides extremely helpful tools to operate in a fast-paced, result-oriented environment. I am impressed by how insightful, (4)\_\_\_\_\_, well organised and focused it is. It will surely help one (5)\_\_\_\_\_ several difficult situations.

**SubQuestion No : 22**

**Q.22 Select the most appropriate option to fill in blank number 2.**

- Ans
- 1. uplifted
  - 2. damaged
  - 3. derailed
  - 4. channelised

Question ID : 264330153591

Option 1 ID : 264330601852

Option 2 ID : 264330601851

Option 3 ID : 264330601854

Option 4 ID : 264330601853

Status : Answered

Chosen Option : 3

**Comprehension:**

In the following passage some words have been deleted. Fill in the blanks with the help of the alternatives given. Select the most appropriate option for each number.

One of the (1)\_\_\_\_\_ tragedies is seeing someone with incredible talent get (2)\_\_\_\_\_ because he or she lacks some basic skills. This book (3)\_\_\_\_\_ the number one reason executives derail, and it provides extremely helpful tools to operate in a fast-paced, result-oriented environment. I am impressed by how insightful, (4)\_\_\_\_\_, well organised and focused it is. It will surely help one (5)\_\_\_\_\_ several difficult situations.

**SubQuestion No : 23**

**Q.23 Select the most appropriate option to fill in blank number 3.**

- Ans
- 1. demeans
  - 2. devours
  - 3. addresses
  - 4. neglects

Question ID : 264330153592

Option 1 ID : 264330601858

Option 2 ID : 264330601857

Option 3 ID : 264330601855

Option 4 ID : 264330601856

Status : Answered

Chosen Option : 3

**Comprehension:**

In the following passage some words have been deleted. Fill in the blanks with the help of the alternatives given. Select the most appropriate option for each number.

One of the (1)\_\_\_\_\_ tragedies is seeing someone with incredible talent get (2)\_\_\_\_\_ because he or she lacks some basic skills. This book (3)\_\_\_\_\_ the number one reason executives derail, and it provides extremely helpful tools to operate in a fast-paced, result-oriented environment. I am impressed by how insightful, (4)\_\_\_\_\_, well organised and focused it is. It will surely help one (5)\_\_\_\_\_ several difficult situations.

**SubQuestion No : 24**

**Q.24** Select the most appropriate option to fill in blank number 4.

- Ans
- 1. sophisticated
  - 2. pessimistic
  - 3. cumbersome
  - 4. readable

Question ID : 264330153593

Option 1 ID : 264330601862

Option 2 ID : 264330601861

Option 3 ID : 264330601859

Option 4 ID : 264330601860

Status : Answered

Chosen Option : 2

**Comprehension:**

In the following passage some words have been deleted. Fill in the blanks with the help of the alternatives given. Select the most appropriate option for each number.

One of the (1)\_\_\_\_\_ tragedies is seeing someone with incredible talent get (2)\_\_\_\_\_ because he or she lacks some basic skills. This book (3)\_\_\_\_\_ the number one reason executives derail, and it provides extremely helpful tools to operate in a fast-paced, result-oriented environment. I am impressed by how insightful, (4)\_\_\_\_\_, well organised and focused it is. It will surely help one (5)\_\_\_\_\_ several difficult situations.

**SubQuestion No : 25**

**Q.25** Select the most appropriate option to fill in blank number 5.

- Ans
- 1. condemn
  - 2. salvage
  - 3. reject
  - 4. discourage

Question ID : 264330153594

Option 1 ID : 264330601866

Option 2 ID : 264330601864

Option 3 ID : 264330601863

Option 4 ID : 264330601865

Status : Answered

Chosen Option : 2