

Delhi Police [Constable] Previous Year Paper

Section: Part A- General Knowledge or Current Affairs

Q.1 The battle of Dharmatpur, which took place between Aurangzeb and Maharaja Jaswant Singh on 15 April 1658, was fought on the banks of which river?

- Ans
- 1. Krishna
 - 2. Yamuna
 - 3. Sutlej
 - 4. Narmada

Question ID: 8161616846

Status: Answered

Chosen Option: 1

Q.2 Which among the following is related to the human skeletal structure?

- Ans
- 1. Spleen
 - 2. Urethra
 - 3. Femur
 - 4. Iris

Question ID: 8161616832

Status: Answered

Chosen Option: 3

Q.3 Which of the following is a water borne disease?

- Ans
- 1. measles
 - 2. Dengue
 - 3. Yellow Fever
 - 4. E. coli

Question ID: 8161616831

Status: Answered

Chosen Option: 1

Q.4 With reference to countries and their capitals, which of the following pairs is correct?

- Ans
- 1. Cambodia-Tbilisi
 - 2. Myanmar - Naypyidaw
 - 3. Brunei-Beirut
 - 4. Azerbaijan-Yerevan

Question ID: **8161616834**
Status: **Answered**
Chosen Option: **2**

Q.5 The Punjab Himalayas lie between the _____ rivers.

- Ans
- 1. Black and Teesta
 - 2. Sutlej (Sutlej) and Kali
 - 3. Teesta and Dihang
 - 4. Indus and Sutlej (Sutlej)

Question ID: **8161616838**
Status: **Answered**
Chosen Option: **1**

Q.6 Mandvi Sagar Beach is situated in _____.

- Ans
- 1. Kerala
 - 2. Maharashtra
 - 3. Odisha
 - 4. Gujarat

Question ID: **8161616836**
Status: **Answered**
Chosen Option: **1**

Q.7 Which of the following schemes is not related to Ministry of Finance?

- Ans
- 1. Pradhan Mantri Garib Kalyan Yojana
 - 2. Pradhan Mantri Kaushal Vikas Yojana
 - 3. Kisan Vikas Patra
 - 4. Pradhan Mantri Suraksha Bima Yojana

Question ID: **8161616817**
Status: **Answered**
Chosen Option: **2**

Q.8 According to the Representation of the People Act, 1951, in the event of a person being elected to both houses of Parliament, he has to notify within ____ days in which house he intends to function.

- Ans
- 1. 22
 - 2. 10
 - 3. 20
 - 4. 15

Question ID: 8161616826
Status: Answered
Chosen Option: 1

Q.9 In India, which of the following is not a type of budget?

- Ans
- 1. Balanced
 - 2. surplus
 - 3. Losses
 - 4. Reserved

Question ID: 8161616816
Status: Answered
Chosen Option: 1

Q.10 In the fourteenth century, which of the following travelers came to India?

- Ans
- 1. Ibn Battuta
 - 2. Duarte Barbosa
 - 3. Francois Bernier
 - 4. Antonio Monserrate

Question ID: 8161616844
Status: Answered
Chosen Option: 1

Q.11 Which of the following is a sect of Jainism?

- Ans
- 1. Hinayana
 - 2. Lingayat
 - 3. Vajrayana
 - 4. Digambar

Question ID: 8161616842
Status: Answered
Chosen Option: 1

Q.12 The festival of Pung Lhabsol is celebrated mainly throughout the _____.

- Ans 1. Sikkim
 2. Assam
 3. Tripura
 4. Nagaland

Question ID: 8161616798
Status: Answered
Chosen Option: 1

Q.13 Which one of the following pairs is not correctly matched?

- Ans 1. Shudraka: Mrithaktik
 2. Kalhan: Ramcharitam
 3. Joyful: Banabhatta
 4. Firdausi: Shahnama

Question ID: 8161616840
Status: Answered
Chosen Option: 2

Q.14 The Chalukya king Vikramaditya is described in the Vikramankadeva Charit written by the Kashmiri poet _____.

- Ans 1. Jayank
 2. orator
 3. Bilhan
 4. Kalhan

Question ID: 8161616841
Status: Answered
Chosen Option: 4

Q.15 By which among the following is the color of a planet determined?

- Ans 1. Its surface temperature
 2. Its average density
 3. Its total mass
 4. Its average distance from the Sun

Question ID: 8161616828
Status: Answered
Chosen Option: 1

Q.16 Demonetisation was a new initiative taken by the Government of India in _____.

- Ans
- 1. October 2018
 - 2. November 2016
 - 3. January 2017
 - 4. December 2015

Question ID: **8161616814**
Status: **Answered**
Chosen Option: **2**

Q.17 The Olympic symbol – popularly known as the Olympic rings throughout the world – is the visible ambassador of the Olympics to millions of people. Which of the following color of rings is not included in it?

- Ans
- 1. White
 - 2. Black
 - 3. Green
 - 4. Red

Question ID: **8161616806**
Status: **Answered**
Chosen Option: **1**

Q.18 The Anglo-Mysore War ended with which of the following battles?

- Ans
- 1. Battle of Vandiwash
 - 2. Battle of Seringapatam
 - 3. Battle of Porto Novo
 - 4. Battle of Polilur

Question ID: **8161616845**
Status: **Not answered**
Chosen Option: **-**

Q.19 Sakshi Malik won a bronze medal in which of the following sports at the 2016 Summer Olympics?

- Ans
- 1. Wrestling
 - 2. Weightlifting
 - 3. Shooting
 - 4. Boxing

Question ID: **8161616805**
Status: **Answered**
Chosen Option: **1**

Q.20 As of June 30, 2020, which of the following products in India has GST. (GST) is excluded?

- Ans
- 1. Life saving drugs
 - 2. Air Conditioner (AC) and Refrigerators
 - 3. Alcohol for human consumption
 - 4. Dental brushing and soap

Question ID: **8161616815**
Status: **Answered**
Chosen Option: 1

Q.21 Kakrapar Irrigation Project is situated on the river _____.

- Ans
- 1. Krishna
 - 2. Godavari
 - 3. Bhagirathi
 - 4. Tapi

Question ID: **8161616837**
Status: **Answered**
Chosen Option: 4

Q.22 World Water Day is celebrated every year on _____.

- Ans
- 1. 20 August
 - 2. 22 March
 - 3. 4 April
 - 4. 24 January

Question ID: **8161616830**
Status: **Answered**
Chosen Option: 1

Q.23 Ujjain is situated on the Malwa plateau on the east side of the river _____.

- Ans
- 1. Indravati
 - 2. Subarnarekha
 - 3. Shipra (Kshipra)
 - 4. Teesta

Question ID: **8161616835**
Status: **Answered**
Chosen Option: 1

Q.24 In the context of players and their related games, which of the following pairs is not correctly matched?

- Ans
- 1. Michael Phelps - Swimming
 - 2. Usain Bolt - Fast Racing
 - 3. Tiger Woods - Snooker
 - 4. Martina Hingis - Tennis

Question ID: 8161616804

Status: Answered

Chosen Option: 3

Q.25 Which state has been linked with Himachal Pradesh under 'Ek Bharat Shreshtha Bharat' program to promote national unity through mutual understanding as on 30 June 2020?

- Ans
- 1. West Bengal
 - 2. Goa
 - 3. Gujarat
 - 4. Kerala

Question ID: 8161616812

Status: Answered

Chosen Option: 2

Q.26 What is the required qualification to be appointed as Attorney General of India (Attorney-General)?

- Ans
- 1. Member of Legislative Assembly
 - 2. President of the Council of States
 - 3. High Court Judge
 - 4. Supreme Court Judge

Question ID: 8161616822

Status: Answered

Chosen Option: 4

Q.27 In August 2020, experts from India, Bangladesh, Nepal and Myanmar gathered to improve which of the following?

- Ans
- 1. Elephant
 - 2. Crocodile
 - 3. Dolphins
 - 4. Tiger

Question ID: 8161616813

Status: Answered

Chosen Option: 3

Q.28 With reference to the famous monuments of India, which one of the following pairs is incorrect?

- Ans
- 1. Kanheri Caves - Mumbai
 - 2. Hazara Ram Temple-Hampi
 - 3. Kandariya Mahadev Temple - Khajuraho
 - 4. Hoshang Shah's Tomb - Delhi

Question ID: 8161616803
Status: Answered
Chosen Option: 1

Q.29 According to Human Development Index 2019, India ranks _____.

- Ans
- 1. 127th
 - 2. 126th
 - 3. 129th
 - 4. 128th

Question ID: 8161616821
Status: Answered
Chosen Option: 1

Q.30 Which of the following is a chromosomal disorder?

- Ans
- 1. Down's Syndrome
 - 2. Haemophilia
 - 3. Sickle cell anaemia
 - 4. Cystic fibrosis

Question ID: 8161616833
Status: Answered
Chosen Option: 1

Q.31 As of August 2020, which of the following states has a two-house system?

- Ans
- 1. Arunachal Pradesh
 - 2. Kerala
 - 3. Gujarat
 - 4. Maharashtra

Question ID: 8161616827
Status: Answered
Chosen Option: 4

Q.32 The Mughal emperor _____ took Bijapur and Golconda under him.

- Ans
- 1. Akbar
 - 2. Shah Jahan
 - 3. Jahangir
 - 4. Aurangzeb

Question ID: 8161616843
Status: Answered
Chosen Option: 4

Q.33 According to the budget 2020-21, how much of the following amount has been proposed for nutrition related programs for the financial year 2020-21?

- Ans
- 1. ₹ 28,600 Crore
 - 2. ₹ 9,500 crores
 - 3. ₹ 35,600 Crore
 - 4. ₹ 53,700 crore

Question ID: 8161616819
Status: Answered
Chosen Option: 1

Q.34 In India, the voting age has been reduced from 21 years to 18 years by the _____ Constitutional Amendment Act, 1988.

- Ans
- 1. 60th
 - 2. 63rd
 - 3. 61st
 - 4. 62nd

Question ID: 8161616824
Status: Answered
Chosen Option: 2

Q.35 In kabaddi game, how many players are there in each team?

- Ans
- 1. 6
 - 2. 8
 - 3. 5
 - 4. 7

Question ID: 8161616807
Status: Answered
Chosen Option: 4

Q.36 PAN is a (an) _____ digit unique alphanumeric number issued by the Income Tax Department.

- Ans
- 1. 8
 - 2. 12
 - 3. 11
 - 4. 10

Question ID: 8161616820
Status: Answered
Chosen Option: 4

Q.37 The Government of India has constituted the Fifteenth Finance Commission with _____ as its operating period.

- Ans
- 1. 2015-2020
 - 2. 2019-2023
 - 3. 2020-2025
 - 4. 2020-2022

Question ID: 8161616818
Status: Answered
Chosen Option: 2

Q.38 Who among the following is one of the first Bharat Ratna Award recipients?

- Ans
- 1. Jawaharlal Nehru
 - 2. CV Raman
 - 3. Rajendra Prasad
 - 4. Mother Teresa

Question ID: 8161616810
Status: Answered
Chosen Option: 1

Q.39 In which of the following places is the bench of Allahabad High Court established?

- Ans
- 1. Gorakhpur
 - 2. Lucknow
 - 3. Agra
 - 4. Noida

Question ID: 8161616825
Status: Answered
Chosen Option: 1

Q.40 As of August 2020, the Ministry of Culture has announced how many new divisions of the Archaeological Survey of India?

- Ans
- 1. 6
 - 2. 8
 - 3. 5
 - 4. 7

Question ID: 8161616802

Status: Answered

Chosen Option: 1

Q.41 Poet Lalit was associated with which of the following regions of India?

- Ans
- 1. Lucknow
 - 2. Kashmir
 - 3. Jaunpur
 - 4. Orchha

Question ID: 8161616808

Status: Answered

Chosen Option: 1

Q.42 The green plants in a terrestrial ecosystem capture about _____ of the energy of sunlight that falls on their leaves and convert it into food energy.

- Ans
- 1. 1%
 - 2. 10%
 - 3. 5%
 - 4. 15%

Question ID: 8161616829

Status: Answered

Chosen Option: 1

Q.43 The Coromandel plain is located in the _____ direction of India.

- Ans
- 1. Southern
 - 2. Eastern
 - 3. Western
 - 4. Northern

Question ID: 8161616839

Status: Answered

Chosen Option: 1

Q.44 As on August 2020, what is the number of Seat (s) allocated for Rajya Sabha from Goa?

- Ans 1. 1
 2. 9
 3. 4
 4. 7

Question ID: **8161616823**
Status: **Answered**
Chosen Option: **1**

Q.45 In the context of Chhau (Chhau) dance marked by UNESCO, which of the following is not a style of Chhau (Chhau) dance?

- Ans 1. Purulia Chhau (Chhau)
 2. Mayurbhanj Chhau (Chhau)
 3. Kutch Chhau (Chhau)
 4. Seraikella Chhau (Chhau)

Question ID: **8161616801**
Status: **Answered**
Chosen Option: **3**

Q.46 Which of the following festivals is celebrated as a belief in the resurrection of Jesus Christ?

- Ans 1. Halloween
 2. Good Friday
 3. Easter
 4. Christmas

Question ID: **8161616799**
Status: **Answered**
Chosen Option: **1**

Q.47 The play 'Andher Nagri Chaupat Raja' is written by which of the following?

- Ans 1. Mahavir Prasad Dwivedi
 2. Maithilisharan Gupta
 3. Sumitranandan Pant
 4. Bharatendu Harishchandra

Question ID: **8161616809**
Status: **Answered**
Chosen Option: **1**

Q.48 Who among the following is credited with the enactment of the First Factories Act, 1881, which had provisions for regulating child employment?

- Ans
- 1. Lord Irwin
 - 2. Lord Mayo
 - 3. Lord Ripon
 - 4. Lord Curzon

Question ID: 8161616847

Status: Answered

Chosen Option: 1

Q.49 _____ is the first non-English feature film to win the Oscar for Best Film at the 92nd Academy Awards.

- Ans
- 1. Crouching Tiger
 - 2. Parasite
 - 3. Bohemian Rhapsody
 - 4. Green Book

Question ID: 8161616811

Status: Answered

Chosen Option: 2

Q.50 Who among the following is not known for his expertise in painting?

- Ans
- 1. Tayeb Mehta
 - 2. Jamini Roy
 - 3. Habib Tanveer
 - 4. Satish Gujral

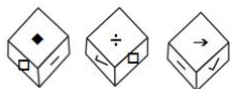
Question ID: 8161616800

Status: Answered

Chosen Option: 1

Section: Part B- Reasoning

Q.1 There are six different symbols drawn over the six faces of a cube. Symbols are \blacklozenge , $-$, \rightarrow , \square , \div and \checkmark . Three different positions of the same cube are shown in the given figures. Which symbol is opposite to \rightarrow ?



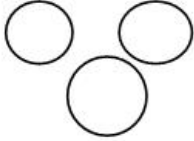
- Ans
- 1. \div
 - 2. \square
 - 3. \checkmark
 - 4. \blacklozenge

Question ID: 8161616870

Status: Answered

Chosen Option: 2

Q.2 Select the option of classes that is best illustrated by the given Venn diagram.



- Ans
- 1. Woman, Wife, Teacher
 - 2. Asia, Bangladesh, Dhaka
 - 3. Flower, Rose, Lotus
 - 4. Old man, Bride, Kid

Question ID: 8161616871

Status: Answered

Chosen Option: 4

Q.3 निम्न चार शब्दों में से तीन में एक निश्चित प्रकार की समानता है और एक असंगत है। उस असंगत विकल्प का चयन करें।

- I. दौड़ना
- II. कूदना
- III. उछलना
- IV. धकेलना

- Ans
- 1. III
 - 2. IV
 - 3. II
 - 4. I

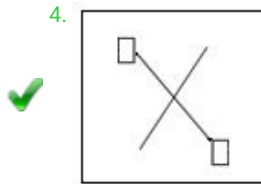
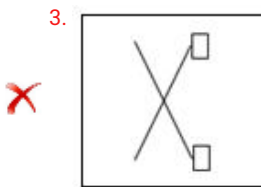
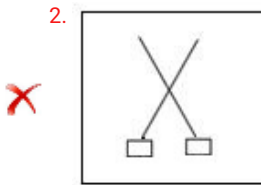
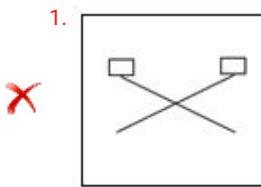
Question ID: 8161616849

Status: Answered

Chosen Option: 2

Q.4 Three of the following four figures are alike in a certain way and one is different. Find the odd one out.

Ans



Question ID: 8161616858

Status: Answered

Chosen Option: 4

Q.5 Which number will replace the question mark (?) in the following number series?

93, 95, 98, 103, 110, ?

1. 132

2. 121

3. 126

4. 118

Question ID: 8161616851

Status: Answered

Chosen Option: 2

Q.6 Choose the number from the given options which is related to the third number in the same way as the second number is related to the first number.

11 : 1326 :: 9 : _____

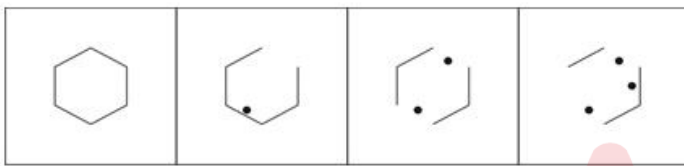
- Ans
- 1. 724
 - 2. 848
 - 3. 925
 - 4. 936

Question ID: 8161616853

Status: Answered

Chosen Option: 1

Q.7 Select the option figure that will come next in the following figure series.



Ans

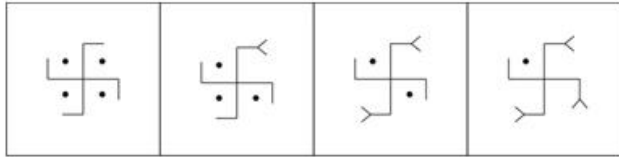
- 1.
- 2.
- 3.
- 4.

Question ID: 8161616862

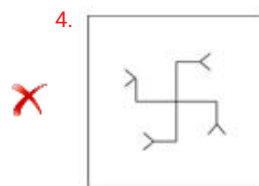
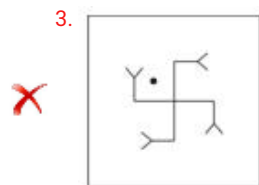
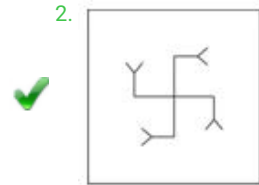
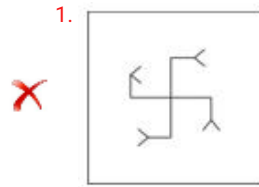
Status: Answered

Chosen Option: 3

Q.8 Select the option figure that will come next in the following figure series.



Ans



Question ID: 8161616861
Status: Answered
Chosen Option: 2

Q.9 Which number will replace the question mark (?) in the following number series?

1713, 1311, 117, 75, ?

Ans 1. 48

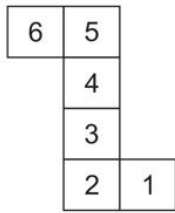
2. 59

3. 53

4. 39

Question ID: 8161616852
Status: Answered
Chosen Option: 3

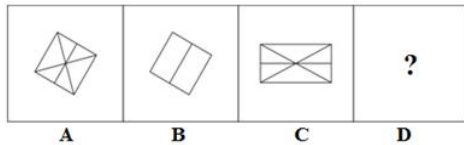
Q.10 When the given figure is folded to form a box, which face CANNOT be adjacent to the face with '2'?



- Ans
- 1. 6
 - 2. 1
 - 3. 5
 - 4. 4

Question ID: 8161616869
Status: Answered
Chosen Option: 4

Q.11 Select the option figure that is related to figure C in the same way as figure B is related to figure A.



- Ans
- 1.
 - 2.
 - 3.
 - 4.

Question ID: 8161616860
Status: Answered
Chosen Option: 4

Q.12 In a certain code language, HOME is written as ELJB. Which word will be written as ARHB in the same code language?

- Ans**
- 1. KUDE
 - 2. EUDK
 - 3. DEKU
 - 4. DUKE

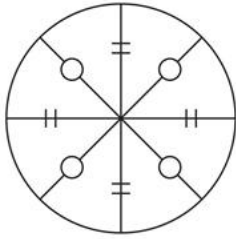
Question ID: **8161616850**

Status: **Answered**

Chosen Option: **4**

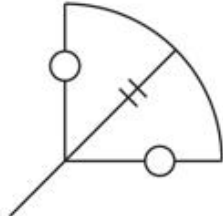


Q.13 Select the option figure which is embedded in the given figure (rotation is NOT allowed).

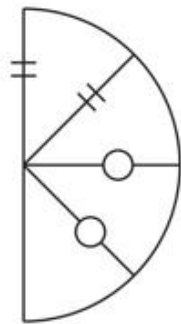


Ans

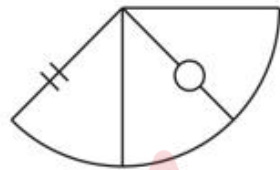
1.



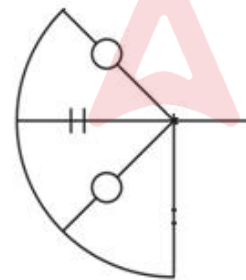
2.



3.



4.



Question ID: 8161616868


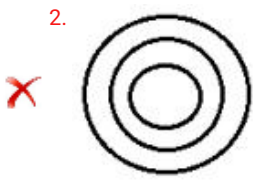
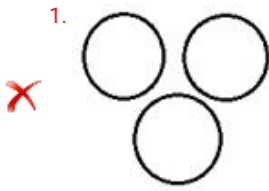
Status: Answered

Chosen Option: 4

Q.14 उस वेन आरेख (Venn diagram) का चयन कीजिए जो दिए गए वर्गों के मध्य संबंध का सर्वश्रेष्ठ निरूपण करता है।

उद्योग, श्रमिक, मशीनें

Ans



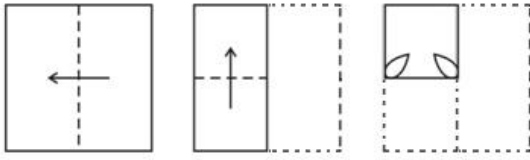
Question ID: 8161616872

Status: Answered

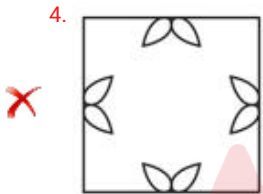
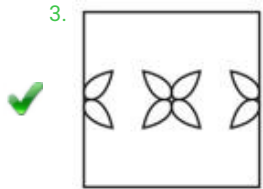
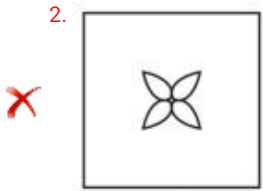
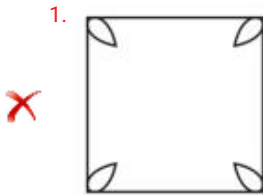
Chosen Option: 3

Adda247

Q.15 A paper is folded and cut as shown below. How will it appear when unfolded?

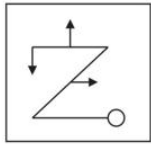


Ans



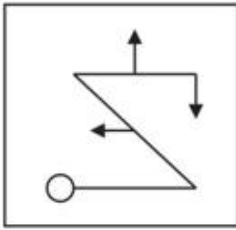
Question ID: 8161616866
Status: Answered
Chosen Option: 3

Q.16 Select the correct mirror image of the given figure when the mirror is placed to the right side of the figure.

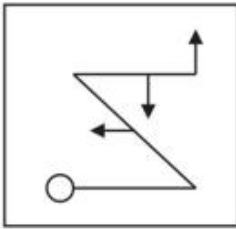


Ans

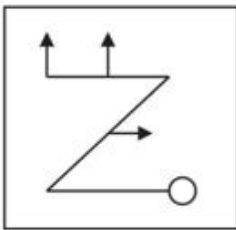
1.



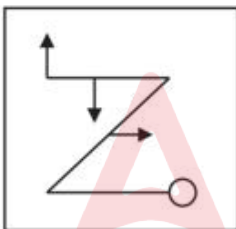
2.



3.



4.



Question ID: 8161616865

Status: Answered

Chosen Option: 1

Q.17 उस विकल्प का चयन कीजिए जिसका तीसरे शब्द से वही संबंध है, जो दूसरे शब्द का पहले शब्द से है।

अंगुली : अंगूठी :: टखना : ?





- Ans
- 1. बिछिया
 - 2. चूड़ी
 - 3. पायल
 - 4. सैंडल

Question ID: 8161616848

Status: Answered

Chosen Option: 3

Q.18 Three of the following four figures are alike in a certain way and one is different. Select the odd one.

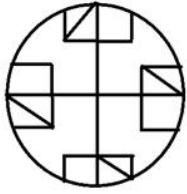
- Ans
- 1. 
 - 2. 
 - 3. 
 - 4. 

Question ID: 8161616857

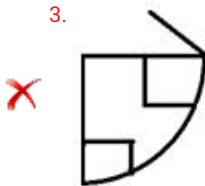
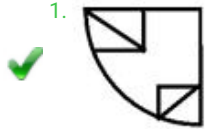
Status: Answered

Chosen Option: 1

Q.19 Select the option figure which is NOT embedded in the given figure (rotation is NOT allowed).



Ans



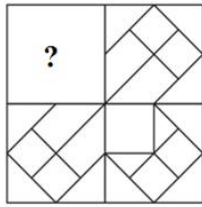
Question ID: 8161616867

Status: Answered

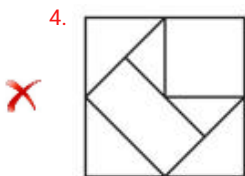
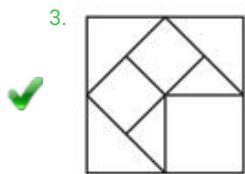
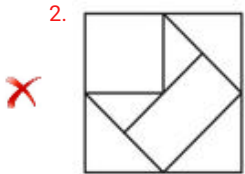
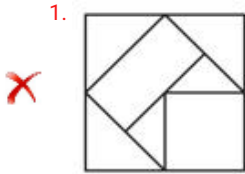
Chosen Option: 1

Adda247

Q.20 Select the option figure that can replace the question mark (?) in the given figure to complete the pattern.



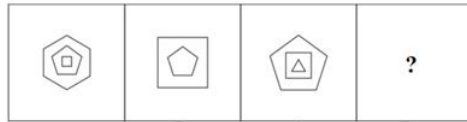
Ans



Question ID: 8161616863
Status: Answered
Chosen Option: 3


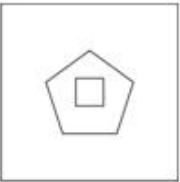



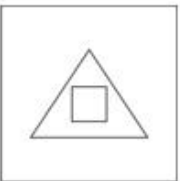




Q.21 Select the option figure that is related to figure C in the same way as figure B is related to figure A.



A B C D

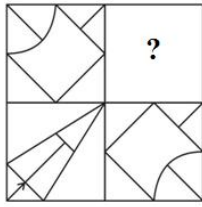
Ans

- 1.  
- 2.  
- 3.  
- 4.  

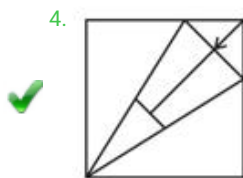
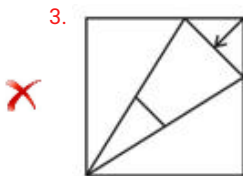
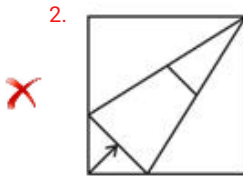
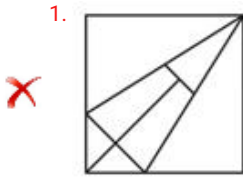


Question ID: 8161616859
Status: Answered
Chosen Option: 3

Q.22 Select the option figure that can replace the question mark (?) in the given figure to complete the pattern.



Ans



Question ID: 8161616864

Status: Answered

Chosen Option: 4

Q.23 Neha wants to sell an item. How many times of the cost price should be the selling price, if she wants to earn 200% profit?

Ans 1. 2 times

2. 4 times

3. 3 times

4. 6 times

Question ID: 8161616856

Status: Answered

Chosen Option: 3

Q.24 Select the set in which the numbers are related in the same way as are the numbers of the following set.

(174, 87, 29)

- Ans
- 1. (212, 106, 42)
 - 2. (432, 216, 72)
 - 3. (530, 265, 92)
 - 4. (236, 92, 22)

Question ID: 8161616854

Status: Answered

Chosen Option: 2

Q.25 Select the correct combination of mathematical signs to sequentially replace the * signs and balance the given equation.

$9 * 6 * 3 * 19 * 4 * 83$

- Ans
- 1. $\times, +, \div, -, =$
 - 2. $\div, \times, +, -, =$
 - 3. $+, \div, \times, -, =$
 - 4. $-, +, +, \times, =$

Question ID: 8161616855

Status: Answered

Chosen Option: 4

Section: Part C- Numerical Ability

Q.1 What is the difference between the compound interest compounded annually and the simple interest on ₹16,000 for 3 years at 5% per annum?

- Ans
- 1. ₹130
 - 2. ₹140
 - 3. ₹150
 - 4. ₹122

Question ID: 8161616882

Status: Answered

Chosen Option: 4

Q.2 A cow is tied to a peg at one corner of a square shaped grass field of side 20.5 m. The length of the rope is 10.5 m. What is the area (in m^2) of the field in which the cow CANNOT graze? (Use $\pi = \frac{22}{7}$)

- Ans
- 1. 333.625
 - 2. 350
 - 3. 86.625
 - 4. 175

Question ID: 8161616886

Status: Answered

Chosen Option: 1

Q.3 A spherical solid lead ball of radius 9 cm is melted and small solid lead balls of radius 3 mm are made. What is the number of small balls made?

- Ans 1. 27,000
 2. 15,000
 3. 25,000
 4. 30,000

Question ID: **8161616887**
Status: **Answered**
Chosen Option: 1

Q.4 ₹6,060 को A, B और C के बीच इस प्रकार बांटा जाता है कि यदि A के हिस्से में से ₹15, B के हिस्से में से ₹20 और C के हिस्से में से ₹25 कम कर दें, तो उनके हिस्सों का अनुपात 5 : 7 : 8 हो जाता है। C की मूल हिस्सेदारी कितनी (₹में) थी?

- Ans 1. 2,120
 2. 1,525
 3. 2,425
 4. 1,515

Question ID: **8161616881**
Status: **Answered**
Chosen Option: 3

Q.5 A publisher sells a book to a wholesale dealer at a profit of 30%. The wholesaler sells the book to a retailer at a profit of 25%. The book is then sold to a customer for ₹312, by earning a profit of 20%. What is the cost price (in ₹) of the book for the wholesale dealer?

- Ans 1. 260
 2. 200
 3. 208
 4. 160

Question ID: **8161616880**
Status: **Not answered**
Chosen Option: -

Q.6 A loan is returned in two equal yearly instalments of ₹5,808. What is the total amount of the loan if the rate of compound interest, compounded annually, is 10% per annum?

- Ans 1. ₹12,450
 2. ₹10,080
 3. ₹18,000
 4. ₹10,800

Question ID: **8161616883**
Status: **Not answered**
Chosen Option: -

Q.7 The average score of a group of students in a test is 64. If 20% students obtained an average score of 91 and 25% students obtained an average score of 31, then what is the average score (correct to one decimal place) of the remaining students?

- Ans**
- 1. 71.2
 - 2. 69.2
 - 3. 70.5
 - 4. 68.7

Question ID: **8161616876**
Status: **Answered**
Chosen Option: **2**

Q.8 Equal square tiles are to be fixed on a wall, 3 m 50 cm in length and 4 m in height. How many largest possible tiles are needed to cover the wall?

- Ans**
- 1. 63
 - 2. 45
 - 3. 56
 - 4. 54

Question ID: **8161616873**
Status: **Not answered**
Chosen Option: -

Q.9 A person covered a certain distance at some speed. Had he moved 6 km/h faster, he would have taken 30 minutes less. If he had moved 4 km/h slower, he would have taken 30 minutes more. What is his original speed (in km/h)?

- Ans**
- 1. 21
 - 2. 24
 - 3. 28
 - 4. 36

Question ID: **8161616885**
Status: **Answered**
Chosen Option: **2**

Q.10 Henry is working in a company. From his monthly salary, 25% is deducted as house rent, 15% is spent on children's education and 18% is spent on other heads. If his monthly savings are ₹7,560, then what is his monthly salary (in ₹)?

- Ans**
- 1. 18,000
 - 2. 17,500
 - 3. 20,000
 - 4. 15,000

Question ID: **8161616878**
Status: **Answered**
Chosen Option: **1**

Q.11 A and B together can finish a work in 10 days, B and C together can finish the same work in 15 days, and A and C together can finish the same work in 20 days. In how many days can C alone finish the same work?

- Ans**
- 1. 90
 - 2. 120
 - 3. 80
 - 4. 100

Question ID: **8161616884**

Status: **Answered**

Chosen Option: **2**

Q.12 A shopkeeper marks his goods at 32% above the cost price. He sells three-fifth of the goods at the marked price, one-fifth at a discount of 20% on the marked price, and the remaining at 40% discount on the marked price. What is his profit/loss percentage?

- Ans**
- 1. Loss 15.17%
 - 2. Loss 17.16%
 - 3. Profit 18.17%
 - 4. Profit 16.16%

Question ID: **8161616877**

Status: **Answered**

Chosen Option: **1**

Q.13 What is the number that is always a factor of the sum of a 2-digit number and a number obtained by interchanging the digits of the number?

- Ans**
- 1. 5
 - 2. 3
 - 3. 11
 - 4. 9

Question ID: **8161616874**

Status: **Answered**

Chosen Option: **3**

Q.14 The value of a machine depreciates at the rate of 25% each year. If the difference between its value at the end of the second year and the third year is ₹24,000, then what is the value (in ₹) of the machine at the end of the first year?

- Ans**
- 1. 1,28,000
 - 2. 1,00,000
 - 3. 1,35,000
 - 4. 1,12,000

Question ID: **8161616879**

Status: **Answered**

Chosen Option: **1**

Q.15 Which of the following is the largest fraction?

$\frac{6}{11}$, $\frac{13}{18}$, $\frac{15}{22}$, $\frac{19}{36}$, $\frac{25}{33}$

- Ans
- 1. $\frac{19}{36}$
 - 2. $\frac{25}{33}$
 - 3. $\frac{15}{22}$
 - 4. $\frac{13}{18}$

Question ID: 8161616875

Status: Answered

Chosen Option: 2

Section: Part D- Computer Proficiency

Q.1 Which of the following view options in MS Word shows the contents of a document as bulleted points?

- Ans
- 1. Draft
 - 2. Web Layout
 - 3. Outline
 - 4. Print Layout

Question ID: 8161616893

Status: Answered

Chosen Option: 4

Q.2 Home page is the _____ page of a website.

- Ans
- 1. about
 - 2. last
 - 3. first
 - 4. middle

Question ID: 8161616896

Status: Answered

Chosen Option: 3

Q.3 Which of the following keyboard shortcuts is used to move through each of the open tabs going to the right in a Chrome browser?

- Ans
- 1. Alt + N
 - 2. Ctrl + N
 - 3. Alt + Tab
 - 4. Ctrl + Tab

Question ID: 8161616897

Status: Answered

Chosen Option: 4

Q.4 POP is an email-related protocol. What is the full form of POP?

- Ans
- 1. Partial Order Program
 - 2. Post Office Protocol
 - 3. Post Office Progress
 - 4. Partial Order Protocol

Question ID: 8161616895

Status: Answered

Chosen Option: 2

Q.5 Which of the following does NOT appear as a part of the 'Clipboard' command group under the Home menu in recent versions of MS Word, such as Word 2016?

- Ans
- 1. Format Painter
 - 2. Paste
 - 3. Cut
 - 4. Show / Hide

Question ID: 8161616891

Status: Answered

Chosen Option: 4

Q.6 State whether the following statements are true or false.

- (i) In MS Word, all paragraphs can have right alignment.
- (ii) In MS Word, all paragraphs cannot have the same hanging position.

- Ans
- 1. (i) False, (ii) False
 - 2. (i) True, (ii) False
 - 3. (i) True, (ii) True
 - 4. (i) False, (ii) True

Question ID: 8161616894

Status: Answered

Chosen Option: 2

Q.7 Which of the following statements about MS Word table is FALSE?

- Ans
- 1. Two or more consecutive cells of a column can be merged.
 - 2. Two or more consecutive cells of a row can be merged.
 - 3. Alternate cells of a row or column cannot be merged.
 - 4. The first and last cells of a table can be merged.

Question ID: 8161616892
Status: Answered
Chosen Option: 4

Q.8 Which of the following appears at the top of a worksheet in MS Excel?

- Ans
- 1. Status bar
 - 2. Horizontal scroll bar
 - 3. Vertical scroll bar
 - 4. Formula bar

Question ID: 8161616888
Status: Answered
Chosen Option: 4

Q.9 Which of the following keys is used to select a range of continuous cells in an MS Excel worksheet?

- Ans
- 1. Alt
 - 2. Shift
 - 3. Tab
 - 4. Ctrl

Question ID: 8161616889
Status: Answered
Chosen Option: 3

Q.10 What will be the result of the following MS-Excel formula?

= CEILING (7, 5)

- Ans
- 1. 8
 - 2. 10
 - 3. 5
 - 4. 7

Question ID: 8161616890
Status: Answered
Chosen Option: 4