

Reasoning

Section Id :	59537112
Section Number :	3
Section type :	Online
Mandatory or Optional :	Mandatory
Number of Questions :	20
Number of Questions to be attempted :	20
Section Marks :	20
Enable Mark as Answered Mark for Review and Clear Response :	Yes
Sub-Section Number :	1
Sub-Section Id :	59537116
Question Shuffling Allowed :	Yes

Question Number : 81 Question Id : 595371345 Question Type : MCQ Option Shuffling : Yes Is Question Mandatory : No

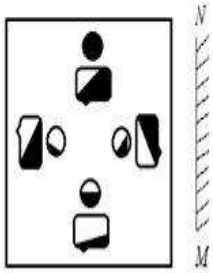
Four words are given of which three are alike in some way and one is different. Choose the odd one out.

Options :

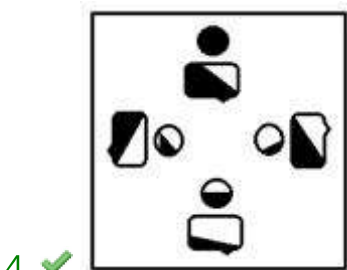
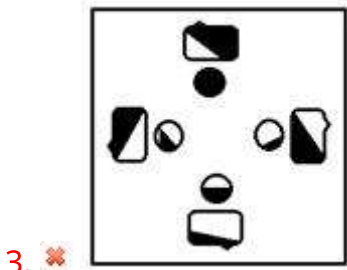
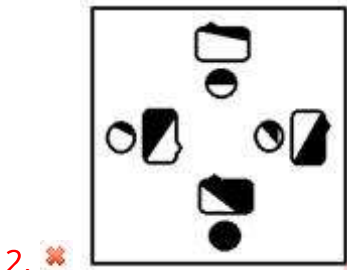
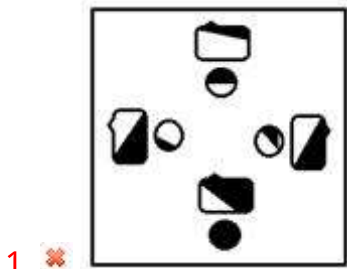
1. ✘ Rectangle
2. ✘ Triangle
3. ✘ Square
4. ✔ Cone

Question Mandatory : No

Select the correct mirror image of the given picture from the following options, when the mirror is placed on the line MN.



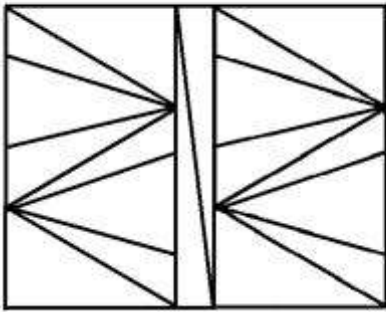
Options :



Question Number : 83 Question Id : 595371347 Question Type : MCQ Option Shuffling : Yes Is

Question Mandatory : No

How many number of triangles are there in the following figure?



Options :

1. ✘ 27

2. ✘ 32


3. ✘ 29

4. ✔ 30

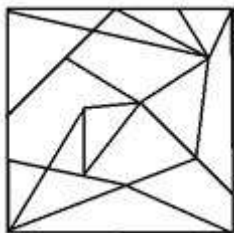
Question Number : 84 Question Id : 595371348 Question Type : MCQ Option Shuffling : Yes Is

Question Mandatory : No

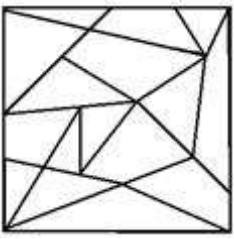
Select the option figure in which the given figure is embedded (Rotation is allowed).



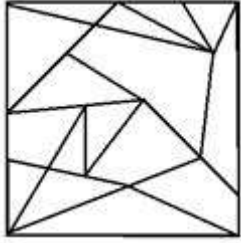
Options :



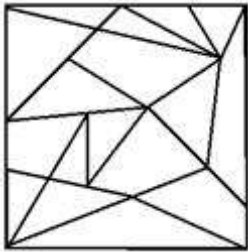
1. ✘



3. ✘



4. ✔



Question Number : 85 Question Id : 595371349 Question Type : MCQ Option Shuffling : Yes Is

Question Mandatory : No

X is Y's mother. W is L's mother. O is Z's father. L is the daughter of M and sister of N. M doesn't have siblings. W is Z's paternal aunt and Y's maternal aunt. How is O related to X?

Options :

1. ✘ Nephew

2. ✘ Cousin

3. ✘ Brother-in-law

4. ✔ Brother

Question Mandatory : No

Which of the following number will replace the question mark (?) and complete the following number series?

126, 217, 344, 513, ?

Options :

1. ✘ 700

2. ✘ 718

3. ✘ 725

4. ✔ 730

Question Number : 87 Question Id : 595371351 Question Type : MCQ Option Shuffling : Yes Is

Question Mandatory : No

Given below are three statements and three conclusions. Take the statements and conclusions to be true even if they are at variance with commonly known facts and decide whether the conclusion/s follow(s) the given statements.

Statements:

I. Some reptiles are amphibians.

II. All amphibians are insects.

III. some insects are not reptiles.

Conclusions:

I. Some insects are reptiles.

II. All reptiles are insects.

III. No insect is a reptile.

Options :

1. ✔ Only conclusion I follows

2. ✘ Conclusions II and III follow

4. ✘ None of the conclusions follows

Question Number : 88 Question Id : 595371352 Question Type : MCQ Option Shuffling : Yes Is

Question Mandatory : No

Select the option that is related to the fourth word in the same way as the first word is related to the second word.

Aquarium : Fish :: Aviary : ?

Options :

1. ✘ Animals

2. ✔ Birds

3. ✘ Insects

4. ✘ Reptile

Question Number : 89 Question Id : 595371353 Question Type : MCQ Option Shuffling : Yes Is

Question Mandatory : No

Four words are given of which three are alike in some way and one is different. Choose the odd one out.

Options :

1. ✘ Apple

2. ✔ Grapes

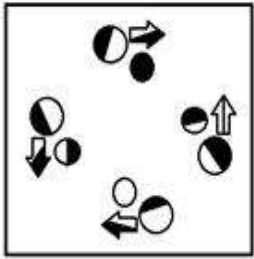
3. ✘ Mangoes

4. ✘ Papaya

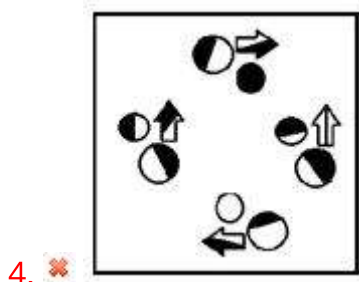
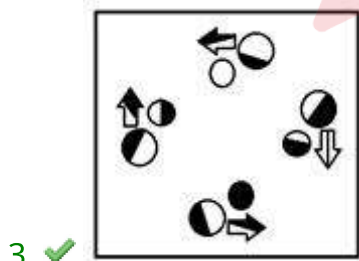
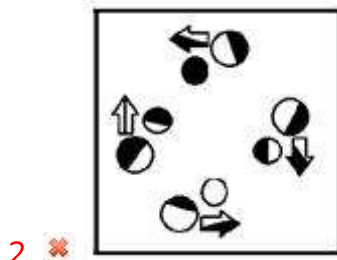
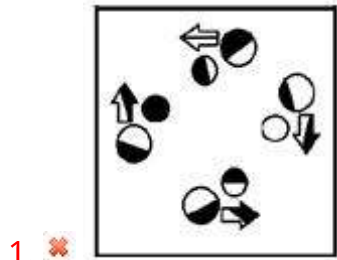
Question Number : 90 Question Id : 595371354 Question Type : MCQ Option Shuffling : Yes Is

Question Mandatory : No

Which of the answer figures is the exact water image of the given problem figure?




Options :

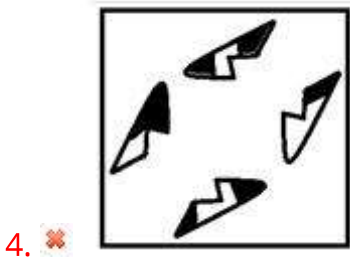
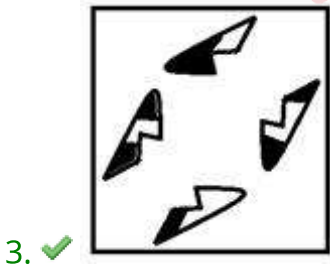
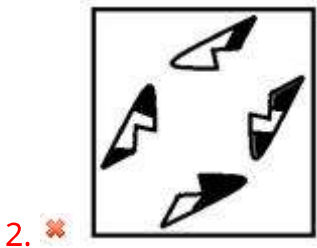
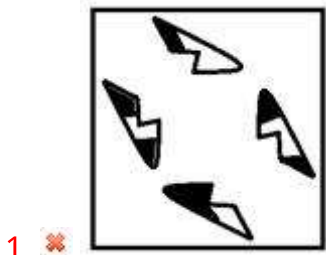


Question Mandatory : No

Select the correct mirror image of the given picture from the following options, when the mirror is placed on the line MN.



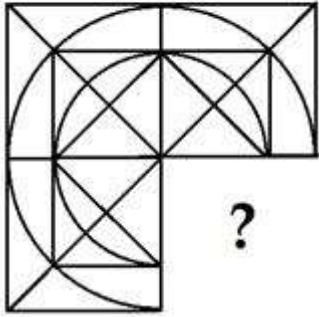
Options :



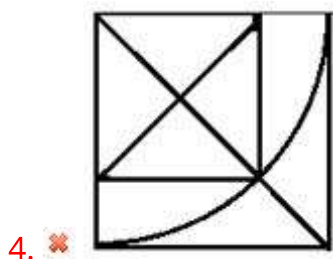
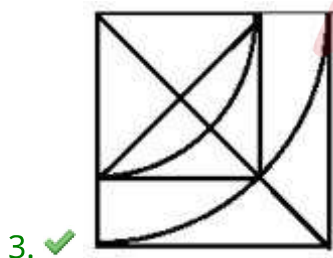
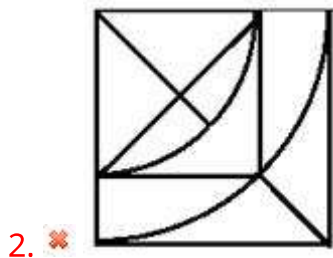
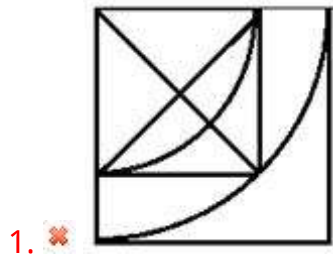
Adda247

Question Mandatory : No

Which of the following figure completes the pattern of the given figure?



Options :



Following are the criteria to recruit a Staff Manager in a Company.

Required qualifications for Staff Manager

- i) Bachelor's degree from an accredited institution with minimum 75% aggregate marks.
- ii) Maximum age of 40 years on 3 May 2021.
- iii) At least 5 years of experience in managing staffs in a government recognized company.
- iv) Fluent in English and Hindi.

If a candidate satisfies all the criteria except

- a) at (i) above, but has complete the master degree with minimum 65% aggregate marks. his/her case is to be referred to the HR.
- b) at (ii) above, but he/she has a 7 years' work experience in the field of management, his/her case is to be referred to the CEO.

Consider the details of a candidate and select one of the following courses of action based on the information provided and the condition and sub conditions given above.

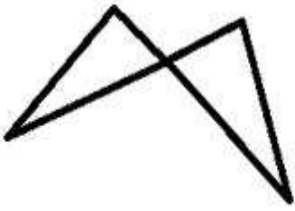
Radhika has completed her bachelor degree with aggregate marks of 80% from a well-recognized university. She is fluent in 3 languages which are English, Hindi and Marathi. She has turned 42 years old as on 12-06-2020. She had been working as a manager for 8 years in one of the government recognized company.

Options :

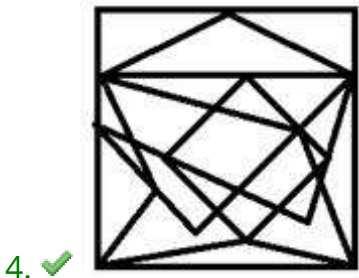
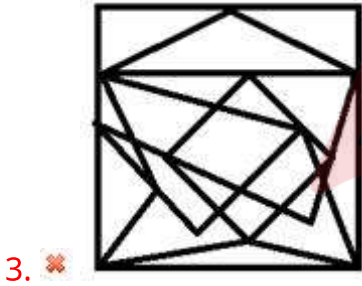
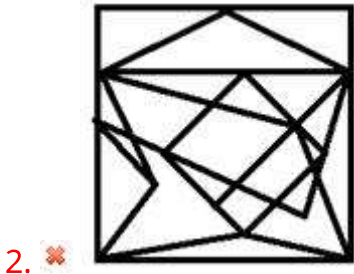
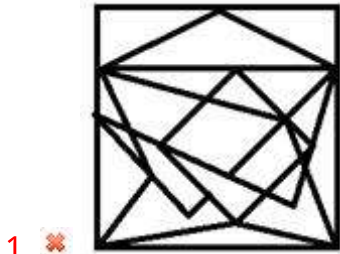
1. ✘ If the candidate is to be selected.
2. ✘ If the case is to be referred to the HR.
3. ✔ If the case is to be referred to the CEO.
4. ✘ If the candidate is not to be selected.

Question Number : 94 Question Id : 595371358 Question Type : MCQ Option Shuffling : Yes Is Question Mandatory : No

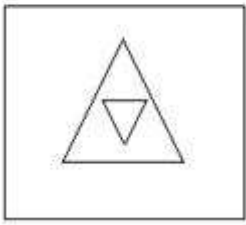
Select the option figure in which the given figure is embedded (Rotation is allowed).



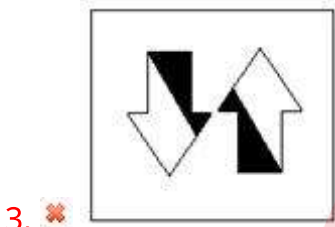
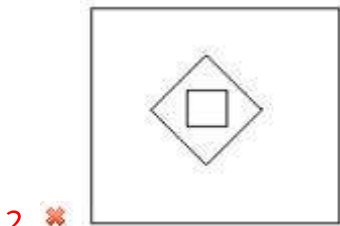
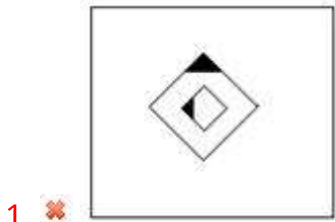
Options :



Select a figure that is similar to the figure given below in a certain manner.



Options :

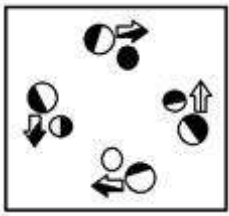


Question Number : 96 Question Id : 595371360 Question Type : MCQ Option Shuffling : Yes Is Question Mandatory : No

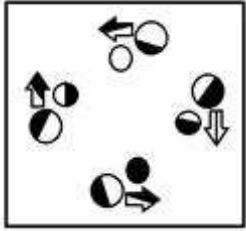
Select the figure that is different than the rest in some manner.

Options :

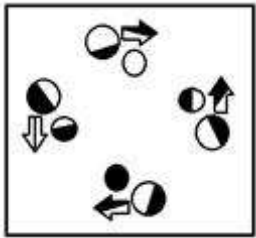
1. ✘



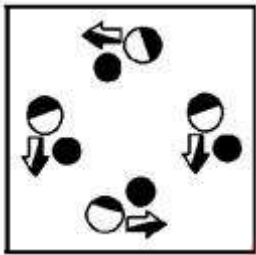
2. ✘



3. ✘



4. ✔



Question Number : 97 Question Id : 595371361 Question Type : MCQ Option Shuffling : Yes Is

Question Mandatory : No

A chocolate cost ₹ 17 each. A biscuits costs ₹ 10 each. Amit spends ₹ 280 on buying them. What is the number of chocolate Amit purchased?

Options :

1. ✘ 5

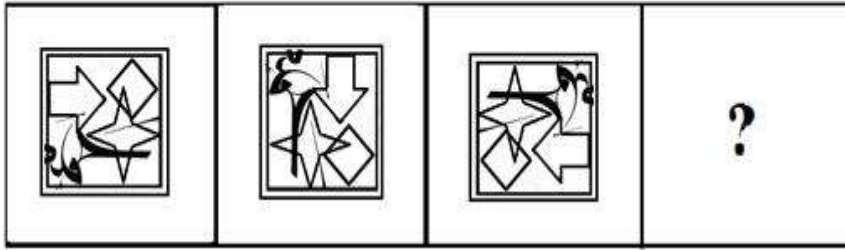
2. ✔ 10

3. ✘ 12

Question Number : 98 Question Id : 595371362 Question Type : MCQ Option Shuffling : Yes Is

Question Mandatory : No

Select a suitable figure from the answer figures which would replace the question mark (?).



Options :



Question Number : 99 Question Id : 595371363 Question Type : MCQ Option Shuffling : Yes Is

Question Mandatory : No

In a certain code language, 'MAGGIE' is written as 'KYEEGC'. How will 'NOODLES' be written in that language?

Options :

1. ✓ LMMBJCQ

2. ✗ KLLCKDP

3. ✗ MNNCKDR

4. ✗ MPPLGCQ

Question Number : 100 Question Id : 595371364 Question Type : MCQ Option Shuffling : Yes Is

Question Mandatory : No

Given below are two statements and two conclusions. Take the statements to be true even if they are at variance with commonly known facts and decide whether the conclusion/s follow the given statement.

Statements:

I. Some herbs are shrubs

II. Some plants are herbs

Conclusions:

I. Some shrubs are plants

II. Some shrubs are not plants

Options :

1. ✗ Only conclusion I follows

2. ✗ Only conclusion II follows

3. ✓ Either conclusion I nor II follows

4. ✗ Neither conclusion I nor II follow

