

## GK / REASONING / MATH

1. Recently Padam Bhushan was awarded to which two sportsperson:
  - (a) M.S. Dhoni & Kidambi Srikanth
  - (b) M.S. Dhoni & Pankaj Advani
  - (c) M.S. Dhoni & Somdev Devvarman
  - (d) M.S. Dhoni & Virat Kohli
2. ASEAN (Association of South East Asian Nations) was founded originally with:
  - (a) 5 members
  - (b) 7 members
  - (c) 10 members
  - (d) 2 members
3. In the recent union Budget, Government of India announced to build a tunnel through Sela Pass. Sela Pass is located in which state.
  - (a) Arunachal Pradesh
  - (b) Manipur
  - (c) Himachal Pradesh
  - (d) Sikkim
4. Which country is a partner country at 32nd Suraj Kund International Craft Mela 2018.
  - (a) Uzbekistan
  - (b) Turkmenistan
  - (c) Kyrgystan
  - (d) Oman
5. The book "exam warriors" which was recently launched is written by:
  - (a) Dr. Manmohan Singh
  - (b) Narendra Modi
  - (c) Shushma Swaraj
  - (d) Prakash Jarvedkar
6. Find the incorrect statement:
  - (a) Cosmic describes anything occurring or located in outer space
  - (b) Lithosphere is the top crust of the Earth which includes the land surface and ocean floors
  - (c) Silicon constitutes the second most important element in the composition of the Earth
  - (d) A tributary is a river which leaves the main river and flows separately
7. Planet that rotates clockwise:
  - (a) Earth
  - (b) Venus
  - (c) Mars
  - (d) Pluto

8. Which one among the following is not an important factor of climate of an area?

- (a) Latitude
- (b) Longitude
- (c) Altitude
- (d) Distance from the sea

9. Find the odd one out?

- (a) FIFA World Cup
- (b) Ryder Cup
- (c) Walker Cup
- (d) Solheim cup

10. Which authority in adjourn the house?

- (a) Speaker of Lok Sabha and Chairman of Rajya Sabha
- (b) President
- (c) Parliamentary Affairs Minister
- (d) Prime Minister

11. Who amongst the following elects the Vice President of India?

- 1. Members of Lok Sabha
- 2. Members of Rajya Sabha
- 3. Members Legislative Assemblies
- 4. Members of Legislative councils

Select the correct answer from the codes given below.

- (a) 1 and 2 only
- (b) 1 and 3 only
- (c) 1, 2 and 3 only
- (d) 1, 2, 3 and 4 all

12. Which of the following occurred first:

- (a) Dandi March
- (b) Jallianwallah Massacre
- (c) Khilafat Movement
- (d) Champaran Satyagraha

13. Which one of the following groups of crops is grown in India during the Rabi season:

- (a) Wheat, Barley, Gram
- (b) Rice, Maize, Wheat
- (c) Barley, Maize, Rice
- (d) Millet, Gram, Rice

14. There are ..... major continents on the earth's surface:

- (a) Six
- (b) Seven
- (c) Eight
- (d) Five

15. What is the International Date Line?

- (a) The equator
- (b) Zero degrees longitude
- (c) 90 degrees east longitude
- (d) 180 degrees longitude north south line on the earth

16. Match List-I with List-II

List-I

- 1. Jawahar Lal Nehru Port
- 2. Paradip Port
- 3. Kandla Port
- 4. Ennore Port

List-II

- A. Tamilnadu
- B. Maharastra
- C. Odisha
- D. Gujarat

- (a) 1-D, 2-A, 3-B, 4-C
- (b) 1-B, 2-C, 3-D, 4-A
- (c) 1-D, 2-C, 3-B, 4-A
- (d) 1-B, 2-A, 3-D, 4-C

17. Identify the mismatched pair:

- (a) Smallest Ocean --- Arctic Ocean
- (b) Lowest Point on Earth — Mariana Trench
- (c) Largest Ocean Pacific Ocean
- (d) Smallest Continent ---- Australia

18. Which country gives Magsaysay awards?

- (a) India
- (b) Britain
- (c) China
- (d) The Philippines

19. Which of the following is wrongly matched:

- (a) Hirakud - Mahanadi
- (b) Pochampad - Godavari
- (c) Bhakra Nagal - Sutlej
- (d) Nagarjun Sagar - Cauvery

20. About what percent of area of our country is the plateau region possessing rich reserves of minerals, fossil fuels and forests?

- (a) 43%
- (b) 27%
- (c) 50%
- (d) 15%

21. Match List I with List II:

List I (Battles)

A. Kalinga War

List II (Fought Between)

1. Ibrahim Lodhi and Babur

- B. First Battle of Panipat      2. Rana Pratap and Akbar  
C. Battle of Haldighati        3. Ashok and Kalinga  
D. Battle of Khanwah         4. Babur and Rana Sangha
- (a) A3, B2, C1, D4  
(b) A3, B1, C2, D4  
(c) A3, B4, C2, D1  
(d) A3, B2, C4, D1

22. The Earth is spherical in shape except for some flattening on some portions. This flattening is at the:

- (a) Equator  
(b) Tropics  
(c)  $66\frac{1}{2}^{\circ}$  North & South  
(d) Pole

23. Identify the state with bicameral legislature:

- (a) Kerala  
(b) Maharastra  
(c) Tamilnadu  
(d) Rajasthan

24. Where is the tomb of Shah Jahan situated?

- (a) Red Fort  
(b) Taj Mahal  
(c) Agra Fort  
(d) Sikandara

25. Find the odd one out on the basis of origin of Resources:

- (a) Flora and Fauna  
(b) Human Beings  
(c) Rocks and metals  
(d) Fisheries

26. The three R's which can help us to conserve natural resource for long term use are?

- (a) Recycle, Regenerate, Reuse  
(b) Reduce, Regenerate, Reuse  
(c) Reduce, Reuse, Redistribute  
(d) Reduce, Recycle, Reuse

27. BOD, a measure of organic impurities stands for:

- (a) Biodegradable oxygen demand  
(b) Bioresistant oxygen demand  
(c) Biological oxygen demand  
(d) Biochemical oxygen demand

28. The compounds leading to origin of life were:

- (a) Urea and nucleic acids
- (b) Amino acids and urea
- (c) Proteins and nucleic acid
- (d) Protein and amino acids

29. During acute summer, when the temperature is very high, the patches of water are seen on the highways from a distance. But when the observer reaches close, the patches disappear & appear at a farther distance. This illusion is due to:

- (a) Total external reflection of light
- (b) Total internal reflection of light
- (c) Partial external reflection of light
- (d) Partial internal reflection of light

30. The disease rickets is caused by the deficiency of:

- (a) Vitamin-D
- (b) Vitamin-C
- (c) Vitamin-A
- (d) All of these

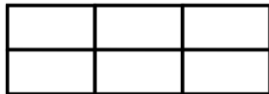
31. Three persons A, B and C wore shirts of black, blue and orange colours (not necessarily in that order) and pants of green, yellow and orange colours (not necessarily in that order). No person wore shirt and pants of the same colour. Further, it is given that-

- 1. A did not wear shirt of black colour.
- 2. B did not wear shirt of blue colour.
- 3. C did not wear shirt of orange colour.
- 4. A did not wear pants of green colour.
- 5. B wore pants of orange colour.

What were the colours of the pants shirt worn by C, respectively?

- (a) Orange and Black
- (b) Green and Blue
- (c) Yellow and Blue
- (d) Yellow and Black

32. How many rectangles are there in the following figure?



- (a) 15
- (c) 17
- (b) 16
- (d) 18

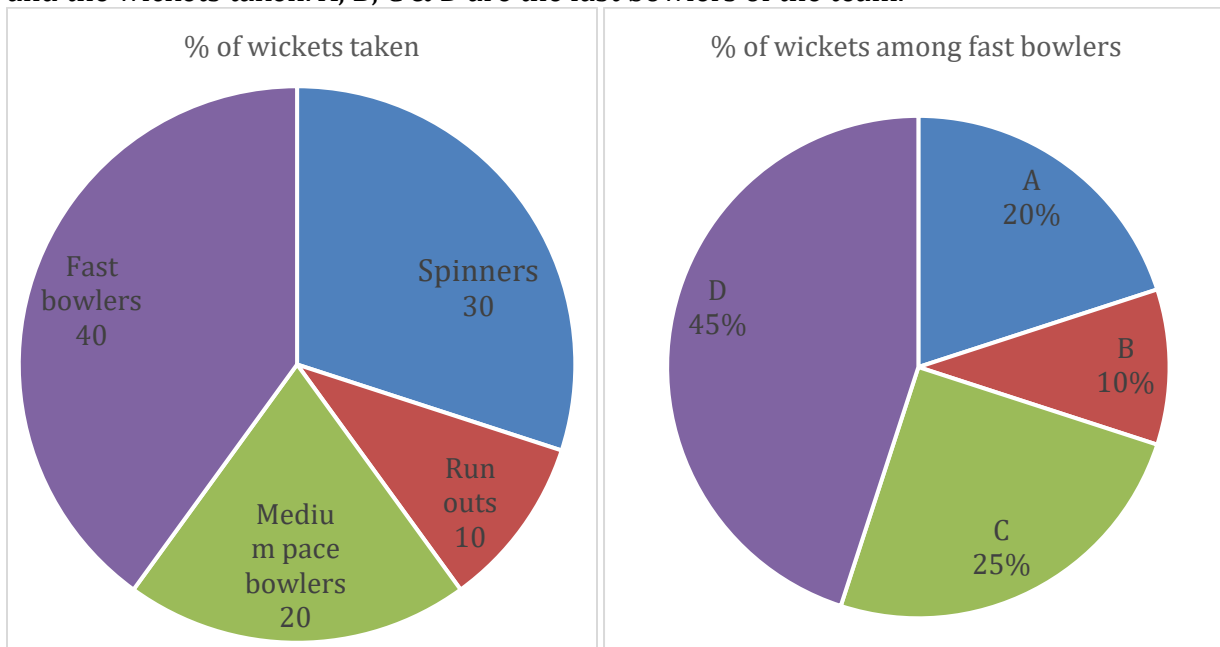
33. The total of the present ages of P, Q, R and S is 96 years. To find out Q's present age, which of the following information given in the statement I and II is/are sufficient.

I. The average age of P, Q and S is 20.

- II. The average age of R and S is 25.  
 (a) Either I or II is sufficient  
 (b) Both I and II together are needed  
 (c) Only II is sufficient  
 (d) Both I and II together are not sufficient


34. P, Q, R are educated; P, R & S are hard working; R, S, & T are employed; P, Q, S, & T are polite. Who is educated, hard working polite but not employed.  
 (a) P  
 (b) Q  
 (c) R  
 (d) T

DIRECTIONS: The following are the statistics of some matches of a cricket team bowlers and the wickets taken. A, B, C & D are the fast bowlers of the team.



35. If the number of wickets taken by spinners is 15, the total number of wickets taken by bowlers is:  
 (a) 50  
 (b) 45  
 (c) 40  
 (d) 35

36. Find the missing number.



- (a) 512

- (c) 256
- (b) 125
- (d) 315

DIRECTIONS: (Question No. 37 & 38) Study the information below and select appropriate answers.

A four inch side cube is cut at each inch to form  $1'' \times 1'' \times 1''$  cubes. The 4'' side cube is coloured blue on all surfaces.

37. How many cubes have exactly three surface coloured:

- (a) 4
- (b) 8
- (c) 6
- (d) NIL

38. How many cubes have no colours on any side:

- (a) 8
- (b) 16
- (c) 32
- (d) 56

39. If BAD is written as YZW and SAME as HZNV, then LOVE will be coded as:

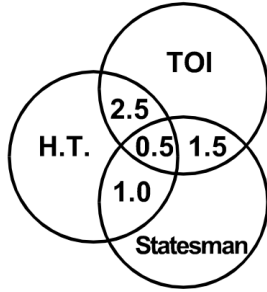
- (a) ROWN
- (b) OJUG
- (c) OLEV
- (d) NOPL

40. In a certain code, COMPUTER is written as RFUVQNPC. How is MEDICINE written in the same code?

- (a) EOJDJEFM
- (b) EOJDEJFM
- (c) MFEJDJOE
- (d) MFEDJJOE

DIRECTIONS: The Venn diagram given below shows the estimated readership of 3 daily newspapers (H.T, TOI & Statesman) in Delhi. The total readership for each of these papers is as below. The total population of the city is approximately 14 million. The common readership (in lakhs) indicated in the Venn diagram

Newspaper	Readership (Lakhs)
H.T.	8.7
TOI	9.1
Statesman	5.6



41. The number of people (in lakhs) who read only one newspaper is:

- (a) 23.4
- (b) 17.4
- (c) 11.9
- (d) None of these

42. Rajesh walked 3 km towards East. Then he turned to his left and walked 6 km. He again turned to his right and walked 3 km. After that he turned to his right and walked 9 km. At last he turned to his right and walked 6 km. At what distance is he from the starting point and in which direction?

- (a) 2 km South
- (b) 1 km North
- (c) 3 km South
- (d) 3 km North

43. How many triangles are there in the given figure?

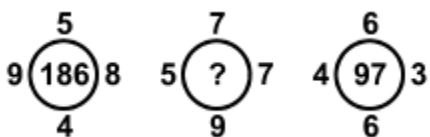


- (a) 16
- (b) 14
- (c) 15
- (d) None of these

44. If INDIA = 125, ENGLAND = 343. Then NEWZELAND =?

- (a) 468
- (b) 1331
- (c) 512
- (d) 729

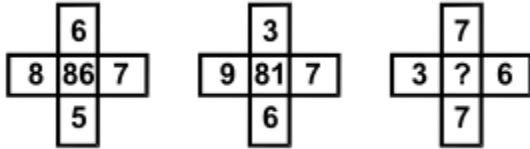
45. Find the missing number in place of question mark (?) from given alternatives:





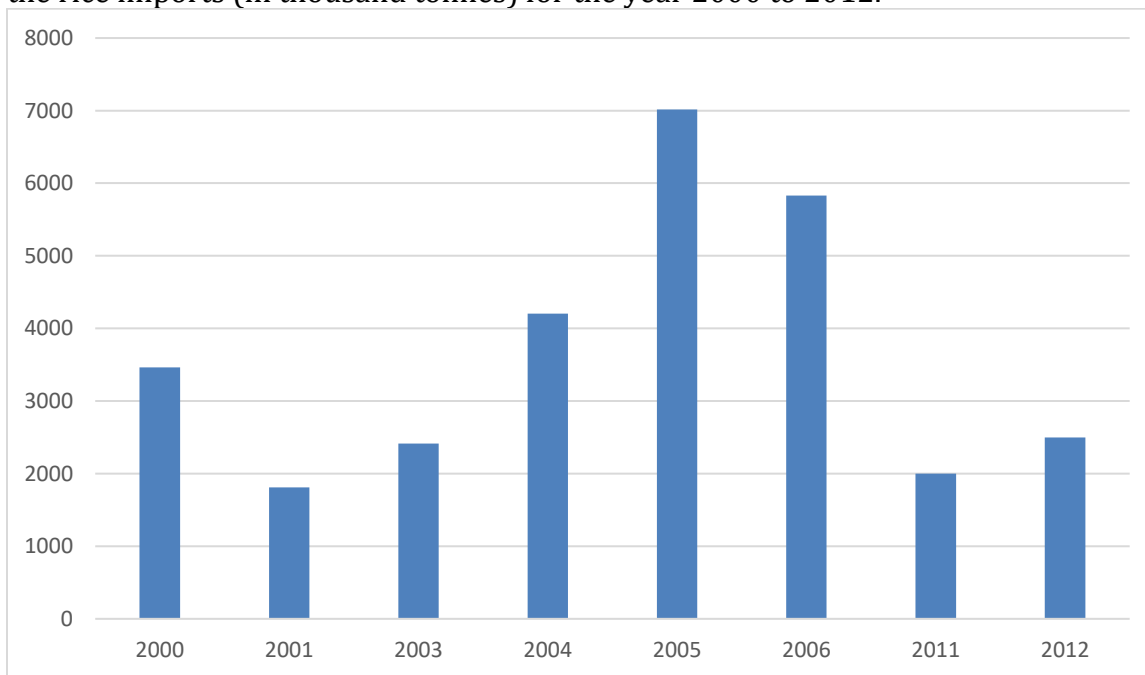
- (a) 210
- (b) 240
- (c) 204
- (d) None of these

46. Find the missing number in place of question mark (?) from given alternatives:



- (a) 67
- (b) 77
- (c) 87
- (d) None of these

DIRECTIONS: The question is to be answered on the basis of bar chart given below giving the rice imports (in thousand tonnes) for the year 2000 to 2012.



47. In which year did imports register highest increase over its preceding year?

- (a) 2012
- (b) 2005
- (c) 2004
- (d) 2003

48. 'YPCUIAT' are jumbled letter of a meaningful word. Rearrange these letters and select from given alternatives, a word which is opposite in meaning to rearranged word:

- (a) Surplus

- (b) Scarcity
- (c) Presence
- (d) Richness

49. In a group of 15, 7 studied German, 8 have studied French and 3 have not studied either. How many of these have studied both German & French?

- (a) 0
- (b) 3
- (c) 4
- (d) 5

50. Three views of the same cube are shown below.



The figure on the face opposite the triangle is:

- (a) Pentagon
- (b) Circle
- (c) Question mark
- (d) Rectangle

DIRECTIONS: At a public meeting there were 8 speakers A, B, C, D, E, F, G and H. Each spoke for some time according to the following scheme –

- I. 'A' spoke after 'F' and took more time than 'B'
- II. 'C' spoke before 'G' and after 'B' and took less time than E.
- III. 'D' spoke after 'H' and before 'B' and took less time than but more time than 'E'.
- IV. spoke after 'A' and took less time than 'B'

51. Who spoke for the longest time?

- (a) A
- (b) B
- (c) C
- (d) D

52. If in a code language 'MUSIC' is written as 'XVQYW' and 'USAGE' is written as 'VQZIF', then how can 'MAGIC' be written in that code:

- (a) XZIWY
- (b) XZWIY
- (c) XZIYW
- (d) XZYIW

53. Which one of the given responses would be a meaningful order of the following:

- 1. Stem
- 2. Flower
- 3. Root

4. Fruits

5. Leaves

(a) 3, 5, 1, 2, 4

(c) 3, 1, 5, 2, 4

(b) 3, 2, 5, 1, 4

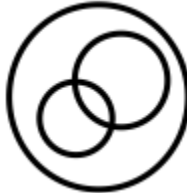
(d) 3, 1, 2, 5, 4

54. Which figure represents the relationship between polygons, quadrilaterals and triangles?

(a)



(b)



(c)



(d)



55. In the following series one term is wrong. Find the wrong term: 20480, 10240, 5120, 2550, 1280

(a) 5120

(b) 10240

(c) 2550

(d) 1280

56. Ramesh is twice as old as Shyam but twice younger than Rajesh, Brijesh is half the age of Shyam but twice the age of Nagesh. Which two persons form the pair of oldest and youngest?

(a) Ramesh and Brijesh

(b) Rajesh and Shyam

- (c) Rajesh and Nagesh
- (d) Ramesh and Nagesh

57. If colour is called music, music is called engine, engine is called car, car is called caravan, caravan is called tent and tent is called igloo, then where do soldiers on battlefield live in?

- (a) Car
- (b) Caravan
- (c) Tent
- (d) Igloo

DIRECTIONS: What will come next in the series.

58. CXDW, EVFU, GTHS, IRJQ, .....

- (a) KPLO
- (b) KPMO
- (c) KPNO
- (d) None of the above

59. A and B are young ones of C. If C is the father of A but B is not the son of C. How are B and C related?

- (a) Niece and Uncle
- (b) Daughter and Father
- (c) Daughter and Mother
- (d) Niece and Maternal Uncle

60. Three of the following four are alike in a certain way and hence form a group. Which one does not belong to that group?

- (a) Zeal
- (b) Fill
- (c) Dial
- (d) Rear

61. On a particular day, sweets were to be equally distributed among 960 students of a school. However, on that particular day 360 students remained absent. Hence, each student present on that day got three sweets extra. Had all 960 students remained present on that day, how many sweets would each student have got?

- (a) 3
- (b) 5
- (c) 7
- (d) 4

62. Choose the correct statement:

- (a) An Irrational Number is a real number that cannot be written as a simple fraction
- (b) A rational Number is a real number that cannot be written as a simple fraction
- (c) An Irrational Number is a real number that can be written as a simple fraction
- (d) A rational Number is a real number that cannot be written as a complex fraction

63. What will happen to the area of a rectangle if its length is doubled and breadth is tripled?

- (a) 5 times more the area of the old rectangle
- (b) Area will remain the same
- (c) 6 times less the area of the old rectangle
- (d) 6 times more the area of the old rectangle

64. A publisher sells copies of books to a retail dealer at Rs. 5 per copy but allows 25 copies to be counted as 24. If the retailer sells each of the 25 copies at Rs. 6, his profit % is:

- (a) 20%
- (b) 24%
- (c) 25%
- (d) 40%

65. An article cost Rs. 80 to the vendor. If he marks the article for 50% more than the cost price and sells it 25% less than the marked price. What is his gain percentage?

- (a) 25%
- (b)  $21\frac{1}{4}\%$
- (c)  $12\frac{1}{2}\%$
- (d)  $15\frac{1}{2}\%$

66. The average age of 45 persons is decreased by  $\frac{1}{9}$  year when one of them having 60 years is replaced by a new comer. Then the age of the new comer is:

- (a) 48 years
- (b) 50 years
- (c) 55 years
- (d) 46 years

67. A bag contains rupee, 50 paise, 25 paise and 10 paise coins in the proportion 1: 3: 5: 7. If the total amount is 22.25, find the number of coins of each kind:

- (a) Rs. 1, 5; 50 paise 25; 25 paise, 15; 10 paise, 25
- (b) Rs. 1, 5; 50 paise 15; 25 paise, 25; 10 paise, 35
- (c) Rs. 1, 5; 50 paise 25; 25 paise, 15; 10 paise, 35
- (d) Rs. 1, 5; 50 paise 25; 25 paise, 25; 10 paise, 25

68. The difference between the compound interest and the simple interest on a certain sum of money at 12% per annum for 2 years is 1800. Find the principal sum when the interest is compounded annually:

- (a) Rs. 1,20,000
- (b) Rs. 1,25,000
- (c) Rs. 1,28,000
- (d) None of these

69. A candidate gets 72% votes out of total votes and he wins by a margin of 264 votes. Total vote and vote polled for elected candidate are respectively:

- (a) 800, 432
- (b) 600,168
- (c) 600, 432
- (d) 830, 576

70. Total weight of 3 boxes is  $60\frac{1}{2}$  Kg. 2<sup>nd</sup> box weighs  $3\frac{1}{2}$  Kg more than 1<sup>st</sup> box. The 3<sup>rd</sup> box weighs  $2\frac{1}{2}$  Kg more than 2<sup>nd</sup> box. The weight of 1<sup>st</sup> box is:

- (a) 36 kg
- (b) 17 kg
- (c) 18 kg
- (d) None of these

71. Find the area of a triangle whose base is 25 cm long and corresponding height is 10.8 cm.:

- (a)  $153 \text{ cm}^2$
- (b)  $135 \text{ cm}^2$
- (c)  $531 \text{ cm}^2$
- (d) None of these

72. A sum of ' 8,500 is to be divided among 5 men, 6 women and 8 boys in the ratio of 10: 7: 1. The share of one woman will be:

- (a) ' 85
- (b) ' 385
- (c) ' 850
- (d) ' 595

73. Number A is 60 more than twice the number B. Number C is 10 more than twice the number A. If average of A B & C is 110. What is the value of C:

- (a) 120
- (b) 210
- (c) 290
- (d) None of these

74. A sum of Rs. 12,000 deposited at compound interest becomes double after 5 years. After 20 years it will become:

- (a) Rs. 1,20,000
- (b) Rs. 1,92,000
- (c) Rs. 1,24,000
- (d) Rs. 96,000

75. The price of an item is increased by 20% and then decreased by 20%. The final price as compared to original price is:

- (a) 20% less
- (b) 20% more

- (c) 4% more
- (d) 4% less

76. When the fractions  $\frac{9}{11}, \frac{8}{10}, \frac{7}{9}, \frac{7}{11}$  are arranged in the ascending order of value, the result is:

- (a)  $\frac{7}{11}, \frac{8}{10}, \frac{7}{9}, \frac{9}{11}$
- (b)  $\frac{9}{11}, \frac{8}{10}, \frac{7}{9}, \frac{7}{11}$
- (c)  $\frac{7}{11}, \frac{7}{9}, \frac{8}{10}, \frac{9}{11}$
- (d)  $\frac{8}{10}, \frac{7}{11}, \frac{9}{11}, \frac{7}{9}$

77. Ram and Shyam work in the same factory. Ram can produce 45 articles in one hour and Shyam can produce 40 articles in one hour. During one week Shyam worked 5 more hours than Ram but produced the same number of articles as Ram. How many hours did Ram work that week:

- (a) 45
- (b) 40
- (c) 50
- (d) 43

78. The ratio between the length and the breadth of a rectangular park is 3: 2. If a man cycling along the boundary of the park at the speed of 12 km/hr completes one round in 8 minutes, then the area of the park (in sq. m) is:

- (a) 15360
- (b) 153600
- (c) 30720
- (d) None of these

79. The perimeter of an isosceles triangle is 42 cm and its base is  $1\frac{1}{2}$  times each of the equal sides. Find the length of each side of triangle:

- (a) 12 cm, 12 cm, 18 cm
- (b) 6 cm, 6 cm, 9 cm
- (c) 18 cm, 18 cm, 24 cm
- (d) None of these

80. At a function at first the ratio of men to women was 5 to 3. After ten men left, it was 1 to 1. How many people were originally there at the function:

- (a) 40
- (b) 35
- (c) 48
- (d) 50

81. A discount of 15% on one article is the same as a discount of 20% on another article. The cost of the two articles can be:

- (a) 40, 20

- (b) 60, 40
- (c) 80, 60
- (d) 100, 80

82. Twenty two women together can complete a work in 16 days. 16 men together can complete the same work in 15 days. The ratio of the working capacity of a man to that of a woman is:

- (a) 3: 4
- (b) 5: 3
- (c) 4: 3
- (d) 4: 5

83. What should come in place of question mark (?) in the following equation?

- (a)  $8\frac{5}{7}$
- (b)  $6\frac{5}{6}$
- (c)  $5\frac{7}{9}$
- (d) None of these

84. A cistern is normally filled in 8 hours; but takes two hours more to fill because of a leak in its bottom. If the cistern is full, the leak will make it empty in:

- (a) 18 hours
- (b) 28 hours
- (c) 40 hours
- (d) None of these

85. The average of four positive integers is 73.5. The highest integer is 108 and the least integer is 29. The difference between remaining two integers is 15. Which of the following is smaller of the remaining two integers?

- (a) 71
- (b) 86
- (c) 73
- (d) 85

86. In a Zoo there are rabbits and pigeons. If their heads are counted, there are 90 while their legs are 224. Find the number of pigeons in the zoo?

- (a) 50
- (b) 68
- (c) 60
- (d) 65

87. Two trains are running in opposite directions with the same speed. If the length of each train is 120 metre and they cross each other in 12 seconds, then the speed of each train (in kmph) is:

- (a) 72



- (b) 36
- (c) 18
- (d) None of these

88. The average price per kg of rice at 10 different places was 4.85. After a week, the price per kg was increased by 20 paise at 3 places and decreased by 10 paise at one place. The new average of price per kg is:

- (a) Rs. 4.88
- (b) Rs. 4.86
- (c) Rs. 4.90
- (d) Rs. 5.35

89. 1085 books can be packed in a carton. If the no. of cartons is 90 then how many books are needed to pack all the cartons?

- (a) 10770
- (b) 97965
- (c) 34390
- (d) 97650

90. Total salary of three persons A, B and C are Rs. 1,44,000. They spend 80%, 85% and 75% respectively. If their savings are in the ratio 8: 9: 20, find C's salary:

- (a) Rs. 48,000
- (b) Rs. 64,000
- (c) Rs. 40,000
- (d) Rs. 32,000

### GENERAL ENGLISH

**DIRECTIONS: (Question No. 91 to 94)** Read the passage given below and answer the questions that follow: The Rajputs occupy a place of honour in the history of India. They were a war like people, proud and patriotic. They were jealous of their honour, and would lay down their life to uphold it. They loved their homes and fought bravely to defend the honour of their womenfolk. Nothing would tame their spirits. Perils only called forth their courage and poverty only increased their power of resistance. None could fight like them. Their motto was 'Better death than dishonour.'

91. The attitude of the author towards the Rajputs is:

- (a) Highly critical
- (b) Sympathetic
- (c) Laudatory
- (d) Unfavourable

92. The Rajputs considered their womenfolk as:

- (a) Frivolous creatures
- (b) Weaklinks
- (c) Goddesses

(d) Worthy of respect

93. Which of the following statements is true?

- (a) The Rajputs set great store by their honour
- (b) They attached great importance to family customs than anything else.
- (c) The Rajputs would draw out swords at the slightest provocation.
- (d) The writer considers the Rajputs as vain and imprudent

94. According to the writer, the Rajputs occupy a place of honour in history because:

- (a) They never lost in battle.
- (b) They were perfect in martial arts.
- (c) They would lay down their lives to uphold their honour.
- (d) They helped and served people in distress

95. Identify the correct sentence:

- (a) It is an one – rupee note
- (b) Higher we go, cooler we feel.
- (c) It is me who caught the thief.
- (d) The house is built of brick.

96. Change the following sentence into correct passive voice: Are they flying kites?

- (a) Are kites being flown by them?
- (b) Are kites flown by them?
- (c) Have kites being flown by them?
- (d) Are kites being flew by them?

97. Identify the incorrect plural:

- (a) Thieves
- (b) Halves
- (c) Mice
- (d) Daughter-in-laws,

98. A Group of flies is a .....

- (a) Flock
- (b) Swarm
- (c) Gaggle
- (d) Nest

99. In following question, four spellings are given for a word. Pick the right choice which has the correct spelling.

- (a) Courageus
- (b) Courageous
- (c) Courageous
- (d) Couragous

100. Give one word for the following word sentence. The life history of a man written by himself.

- (a) Biography
- (b) Autobiography
- (c) Bibliography
- (d) Histology

101. Give antonyms of the following word.

PROSPERITY

- (a) Rich
- (b) Poor
- (c) Adversity
- (d) Well-off

102. Fill in the blanks with the correct form of verbs/tenses given in bracket. When Megha \_\_\_\_\_ (have) problems at school, her parents \_\_\_\_\_ (usually help) her to cope with them.

- (a) had, helped
- (b) would have, usually help
- (c) had, usually helped
- (d) has, usually helped

103. Which of the following pair does not match correctly:

- (a) Sita sings delightfully — Adverbs of manner
- (b) Sita sings pretty well — Adverbs of degree
- (c) The weather is delightfully cool -Adverbs of time
- (d) He seldom comes here — Adverbs of frequency

104. Fill in the blanks with the correct form of verb given in bracket.

I will not go to school, if it ..... (rain)

- (a) Will rain
- (b) have rained
- (c) is raining
- (d) rains

105. In the following question, four spellings are given for a word. Pick the right choice which has the correct spelling.

- (a) Vacume
- (b) Vaccum
- (c) Vacuum
- (d) Vaccume

DIRECTIONS: Identify the correct tense form in the given sentence.

106. You have brought fruits and coconuts.

- (a) Present perfect tense
- (b) Simple present tense

- (c) Present perfect continuous tense
- (d) Present continuous tense

DIRECTIONS: In the following question, out of the given alternatives, choose the word opposite in meaning of the given word.

107. Rescind

- (a) Revoke
- (b) Demolish
- (c) Sluggish
- (d) Permit

108. Three sentences have been given. You have to find out the sentence in which an adverb modifies the meaning of another adverb:

1. Jalpa sings well
2. He speaks very fluently
3. This soap is delicately perfumed.

- (a) 1
- (b) 2
- (c) 2 and 3
- (d) 1 and 3

DIRECTIONS: In the following question, out of the four alternatives choose the one which can be substituted for the given words/sentence:

109. To free a person by a verdict of "Not guilty"

- (a) Acquaint
- (b) Acquit
- (c) Acquire
- (d) Acquiesce

110. Choose the wrong spelt word.

- (a) Commemorate
- (b) Commendable
- (c) Commendatory
- (d) Commensurate

111. Fill in the blank with suitable preposition: Ram was a heir a big fortune.

- (a) Of
- (b) To
- (c) In
- (d) With

112. Choose the correct spelt word.

- (a) Repercussion
- (b) Reparussion
- (c) Repurcusion
- (d) Repurcussien

113. Substitute one word for the following. One, who goes on foot.

- (a) Footer
- (b) Teetotaller
- (c) Pedestrian
- (d) Vagabond

DIRECTIONS: In the following question, the sentence has been given in active/ passive voice. From the given alternatives, choose the one which best expresses the given sentence passive/active voice.

114. They objected to my proposal:

- (a) My proposal objected them
- (b) My proposal was objected by them
- (c) My proposal was objected to by them
- (d) Their proposal was objected by me

DIRECTIONS: In the question, choose the word from the given alternatives which best expresses the meaning of word given in the question.

115. GLITCH:

- (a) Sound
- (b) Scratch
- (c) Shine
- (d) Malfunction

DIRECTIONS: Fill in the blank with correct preposition.

116. The thief entered the room ..... the window:

- (a) From
- (b) By
- (c) Through
- (d) With

117. Fill in the gap suitably:

Measles \_\_\_\_\_ infectious.

- (a) is
- (b) are
- (c) were
- (d) are being

DIRECTIONS: There is a certain relation between two words on one side of sign :: Choose the suitable option that has the closest similar relation from the following alternatives.

118. Horse : Colt ::

- (a) Goat: Bleat
- (b) Dawn: Twilight
- (c) Dog: Puppy
- (d) Actor: Stage

119. Choose the option that reports the following sentence in indirect speech.

He said, "I am glad to be here this evening."

- (a) He said that he was glad to be here this evening.
- (b) He told that I was glad to be there that evening.
- (c) He said that he was glad to be there that evening.
- (d) None of these

DIRECTION: Select suitable words/phrases to complete the following sentence.

120. One should not be afraid problems.

- (a) Of
- (b) From
- (c) At
- (d) About

### Solutions

- S1. Ans.(b)
- S2. Ans.(a)
- S3. Ans.(a)
- S4. Ans.(c)
- S5. Ans.(b)
- S6. Ans.(d)
- S7. Ans.(b)
- S8. Ans.(b)
- S9. Ans.(a)
- S10. Ans.(a)
- S11. Ans.(a)
- S12. Ans.(d)
- S13. Ans.(a)
- S14. Ans.(b)
- S15. Ans.(d)
- S16. Ans.(b)
- S17. Ans.(b)
- S18. Ans.(d)
- S19. Ans.(d)
- S20. Ans.(b)
- S21. Ans.(b)
- S22. Ans.(d)
- S23. Ans.(b)
- S24. Ans.(c)
- S25. Ans.(c)
- S26. Ans.(d)
- S27. Ans.(d)

S28. Ans.(c)  
S29. Ans.(b)  
S30. Ans.(a)  
S31. Ans.(b)  
S32. Ans.(d)  
S33. Ans.(d)  
S34. Ans.(a)  
S35. Ans.(b)  
S36. Ans.(b)  
S37. Ans.(b)  
S38. Ans.(c)  
S39. Ans.(a)  
S40. Ans.(c)  
S41. Ans.(c)  
S42. Ans.(c)  
S43. Ans.(d)  
S44. Ans.(d)  
S45. Ans.(c)  
S46. Ans.(a)  
S47. Ans.(c)  
S48. Ans.(a)  
S49. Ans.(b)  
S50. Ans.(c)  
S51. Ans.(a)  
S52. Ans.(c)  
S53. Ans.(c)  
S54. Ans.(c)  
S55. Ans.(c)  
S56. Ans.(c)  
S57. Ans.(d)  
S58. Ans.(a)  
S59. Ans.(b)  
S60. Ans.(b)  
S61. Ans.(b)  
S62. Ans.(a)  
S63. Ans.(a)  
S64. Ans.(c)  
S65. Ans.(c)  
S66. Ans.(c)  
S67. Ans.(b)  
S68. Ans.(b)  
S69. Ans.(c)  
S70. Ans.(b)  
S71. Ans.(b)  
S72. Ans.(d)

S73. Ans.(b)  
S74. Ans.(b)  
S75. Ans.(d)  
S76. Ans.(c)  
S77. Ans.(b)  
S78. Ans.(b)  
S79. Ans.(a)  
S80. Ans.(a)  
S81. Ans.(c)  
S82. Ans.(c)  
S83. Ans.(b)  
S84. Ans.(c)  
S85. Ans.(a)  
S86. Ans.(b)  
S87. Ans.(b)  
S88. Ans.(c)  
S89. Ans.(d)  
S90. Ans.(b)  
S91. Ans.(c)  
S92. Ans.(d)  
S93. Ans.(a)  
S94. Ans.(c)  
S95. Ans.(d)  
S96. Ans.(a)  
S97. Ans.(d)  
S98. Ans.(b)  
S99. Ans.(c)  
S100. Ans.(b)  
S101. Ans.(c)  
S102. Ans.(c)  
S103. Ans.(c)  
S104. Ans.(d)  
S105. Ans.(c)  
S106. Ans.(a)  
S107. Ans.(a)  
S108. Ans.(b)  
S109. Ans.(b)  
S110. Ans.(c)  
S111. Ans.(d)  
S112. Ans.(a)  
S113. Ans.(c)  
S114. Ans.(c)  
S115. Ans.(d)  
S116. Ans.(c)



S117. Ans.(a)

S118. Ans.(c)

S119. Ans.(c)

S120. Ans.(a)